

Constable Executive Male and Female in Delhi Police Examination 2023

Roll Number	
Candidate Name	
Venue Name	
Exam Date	14/11/2023
Exam Time	12:00 PM - 1:30 PM
Subject	Constable Executive Male and Female in Delhi Police Examination 2023

Section : General Knowledge

Q.1 Who was defeated by Chandragupta Maurya in order to found the Maurya dynasty?

- Ans 1. Dhana Nanda.
 2. Bimbisara
 3. Mahapadma Nanda
 4. Ajatshatru

Question ID : 264330119709
Option 1 ID : 264330469114
Option 2 ID : 264330469112
Option 3 ID : 264330469111
Option 4 ID : 264330469113
Status : Answered
Chosen Option : 2

Q.2 Any dispute between the Government of India and one or more States or between the Government of India and any State or States comes under _____ jurisdiction of the Supreme Court of India.

- Ans 1. Advisory
 2. Appellate
 3. Exclusive Original
 4. Writ

Question ID : 264330130479
Option 1 ID : 264330511029
Option 2 ID : 264330511028
Option 3 ID : 264330511027
Option 4 ID : 264330511030
Status : Answered
Chosen Option : 1

Q.3 Kajli Teej is the cultural festival of which Indian state?

- Ans 1. Rajasthan
 2. Goa
 3. West Bengal
 4. Maharashtra

Question ID : 264330109608
Option 1 ID : 264330430711
Option 2 ID : 264330430710
Option 3 ID : 264330430712
Option 4 ID : 264330430709
Status : Not Answered
Chosen Option : --

Q.4 In whose presence does the Governor take oath or make affirmation in case of the absence of the Chief Justice of the High Court?

- Ans
- 1. Nominated judge by President
 - 2. Secretary of State Legislature
 - 3. Senior-most judge of High Court available
 - 4. Speaker of State legislature

Question ID : 26433069888
Option 1 ID : 264330274058
Option 2 ID : 264330274056
Option 3 ID : 264330274059
Option 4 ID : 264330274057
Status : Answered
Chosen Option : 4

Q.5 What is the slogan of the Pradhan Mantri Jan Dhan Yojana?

- Ans
- 1. MeraAdhikar, MeraKhaata
 - 2. MeraKhaata, MeraAdhikar
 - 3. Mera Paisa, Mere Bank Me
 - 4. Mera Khaata, Bhagya Vidhaata

Question ID : 26433059311
Option 1 ID : 264330232122
Option 2 ID : 264330232121
Option 3 ID : 264330232123
Option 4 ID : 264330232120
Status : Answered
Chosen Option : 2

Q.6 According to Census 2011 of India, which religion recorded highest literacy rate from following?

- Ans
- 1. Hindu
 - 2. Muslim
 - 3. Jain
 - 4. Sikh

Question ID : 264330138114
Option 1 ID : 264330541064
Option 2 ID : 264330541065
Option 3 ID : 264330541063
Option 4 ID : 264330541066
Status : Not Answered
Chosen Option : --

Q.7 In 1932, the Poona Pact was signed between Mahatma Gandhi and _____.

- Ans
- 1. C. Natesa Mudaliar
 - 2. Taravath Madhavan Nair
 - 3. Ramaswami Naicker-Periyar
 - 4. Dr. Babasaheb Ambedkar

Question ID : 264330114860
Option 1 ID : 264330451525
Option 2 ID : 264330451526
Option 3 ID : 264330451528
Option 4 ID : 264330451527
Status : Answered
Chosen Option : 4

Q.8 In which year did India adopt a dual exchange rate for the interim period?

- Ans
- 1. 1994
 - 2. 1990
 - 3. 1996
 - 4. 1992

Question ID : 264330109396
Option 1 ID : 264330429863
Option 2 ID : 264330429861
Option 3 ID : 264330429864
Option 4 ID : 264330429862
Status : Not Answered
Chosen Option : --

Q.9 The Hindi novel 'Indrajal' is written by:

- Ans
- 1. Ramdhari Singh Dinkar
 - 2. Harivansh Rai Bachchan
 - 3. Jaishankar Prasad
 - 4. Namvar Singh

Question ID : 26433072947
Option 1 ID : 264330285980
Option 2 ID : 264330285982
Option 3 ID : 264330285983
Option 4 ID : 264330285981
Status : Not Answered
Chosen Option : --

Q.10 Rafflesia arnoldii is famous because:

- Ans
- 1. it has the thickest trunk
 - 2. it has the largest leaves in the plant kingdom
 - 3. it is the tallest plant in the plant kingdom
 - 4. it has the largest flower in the plant kingdom

Question ID : 264330120904
Option 1 ID : 264330473833
Option 2 ID : 264330473834
Option 3 ID : 264330473831
Option 4 ID : 264330473832
Status : Not Answered
Chosen Option : --

Q.11 National Investment Fund in India is a corpus fund that mobilises its financial receipts from _____.

- Ans
- 1. proceeds of profits of Central Public Sector Undertakings
 - 2. proceeds from disinvestment of Central Public Sector Undertakings
 - 3. savings of General Provident Fund
 - 4. contributory pension scheme

Question ID : 264330111786
Option 1 ID : 264330439232
Option 2 ID : 264330439231
Option 3 ID : 264330439230
Option 4 ID : 264330439229
Status : Not Answered
Chosen Option : --

Q.12 When did India host the Asian Games for the first time?

- Ans 1. 1951
 2. 1954
 3. 1962
 4. 1990

Question ID : 264330119257
Option 1 ID : 264330467317
Option 2 ID : 264330467315
Option 3 ID : 264330467316
Option 4 ID : 264330467318
Status : Answered
Chosen Option : 1

Q.13 Destruction, weathering, dissolving, rainfall, and lithification are the major geological processes that contribute to the formation of which of the following rocks?

- Ans 1. Igneous rocks
 2. Sedimentary rocks
 3. Sub-metamorphic rocks
 4. Metamorphic rocks

Question ID : 264330131816
Option 1 ID : 264330516363
Option 2 ID : 264330516364
Option 3 ID : 264330516366
Option 4 ID : 264330516365
Status : Not Answered
Chosen Option : --

Q.14 Which of the following statements are correct regarding festivals followed in Christianity?

- A. Easter is the day celebrated for the 'Resurrection of Jesus Christ'.
B. According to the Bible, 'Three days after Jesus was crucified, he was resurrected'.
C. Good Friday is to commemorate the day of crucifixion of Jesus Christ.

- Ans 1. A and C only
 2. B and C only
 3. A, B and C
 4. A and B only

Question ID : 264330119656
Option 1 ID : 264330468901
Option 2 ID : 264330468900
Option 3 ID : 264330468902
Option 4 ID : 264330468899
Status : Answered
Chosen Option : 1

Q.15 Which of the following is NOT a key player in the microfinance sector?

- Ans 1. IDBI
 2. Regional rural banks
 3. Small finance banks
 4. Commercial banks

Question ID : 264330119669
Option 1 ID : 264330468952
Option 2 ID : 264330468954
Option 3 ID : 264330468953
Option 4 ID : 264330468951
Status : Not Answered
Chosen Option : --

Q.16 The Begumpuri mosque was built during the reign of Sultan _____.

- Ans 1. Ghiyasuddin Balban
 2. Qutbuddin Aybak
 3. Muhammad Bin Tughluq
 4. Jalaluddin Khalji

Question ID : 264330183098
Option 1 ID : 264330718127
Option 2 ID : 264330718126
Option 3 ID : 264330718125
Option 4 ID : 264330718124
Status : Not Answered
Chosen Option : --

Q.17 R Muthukannammal was conferred the Padma Shri award in 2022. Which of the following is her contribution?

- Ans 1. Working with Orissa's poor and backward communities
 2. Specializing in the study of Indian society
 3. Being a custodian of the early dance form of Bharatnatyam
 4. Playing a key role in powering India's Blue Revolution

Question ID : 26433091036
Option 1 ID : 264330357555
Option 2 ID : 264330357554
Option 3 ID : 264330357556
Option 4 ID : 264330357553
Status : Answered
Chosen Option : 4

Q.18 Which of the following ministries collaborated with NCERT on a joint mission for the NISHTHA capacity-building programme for Eklavya school teachers and principals?

- Ans 1. Ministry of Skill Development and Entrepreneurship
 2. Ministry of Minority Affairs
 3. Ministry of Education
 4. Ministry of Tribal Affairs

Question ID : 264330111589
Option 1 ID : 264330438441
Option 2 ID : 264330438443
Option 3 ID : 264330438442
Option 4 ID : 264330438444
Status : Answered
Chosen Option : 3

Q.19 What is the molecular mass of an ozone molecule?

- Ans 1. 32
 2. 48
 3. 16
 4. 18

Question ID : 264330177018
Option 1 ID : 264330694269
Option 2 ID : 264330694268
Option 3 ID : 264330694267
Option 4 ID : 264330694270
Status : Not Answered
Chosen Option : --

Q.20 The famous south Indian epic "Silappadikaram" was originally written in _____ language.

- Ans 1. Sanskrit
 2. Tamil
 3. Malayalam
 4. Telugu

Question ID : 264330119476
Option 1 ID : 264330468189
Option 2 ID : 264330468190
Option 3 ID : 264330468188
Option 4 ID : 264330468187
Status : Answered
Chosen Option : 2

Q.21 Jhali is the folk dance of which Indian state?

- Ans 1. Uttar Pradesh
 2. Madhya Pradesh
 3. Bihar
 4. Himachal Pradesh

Question ID : 264330141326
Option 1 ID : 264330553639
Option 2 ID : 264330553640
Option 3 ID : 264330553642
Option 4 ID : 264330553641
Status : Not Answered
Chosen Option : --

Q.22 Musician Bhajan Sopori was a Santoor maestro from the _____ Gharana.

- Ans 1. Maihar
 2. Benaras
 3. Punjab
 4. Sufiana

Question ID : 264330112683
Option 1 ID : 264330442819
Option 2 ID : 264330442820
Option 3 ID : 264330442818
Option 4 ID : 264330442817
Status : Answered
Chosen Option : 2

Q.23 Which of the following is NOT a feature of India's parliamentary government?

- Ans 1. Dissolution of the Rajya Sabha
 2. Presence of nominal and real executives
 3. Membership of the ministers in the legislature
 4. Majority party rule

Question ID : 264330114134
Option 1 ID : 264330448624
Option 2 ID : 264330448621
Option 3 ID : 264330448623
Option 4 ID : 264330448622
Status : Answered
Chosen Option : 2

Q.24 The Harappan city of Dholavira was divided into how many parts?

- Ans 1. 2
 2. 4
 3. 3
 4. 5

Question ID : 264330109641
Option 1 ID : 264330430841
Option 2 ID : 264330430843
Option 3 ID : 264330430842
Option 4 ID : 264330430844
Status : Answered
Chosen Option : 1

Q.25 Identify the crop which is grown in Rabi season in North India from the following.

- Ans 1. Rice
 2. Cotton
 3. Gram
 4. Bajra

Question ID : 264330181455
Option 1 ID : 264330711743
Option 2 ID : 264330711744
Option 3 ID : 264330711746
Option 4 ID : 264330711745
Status : Not Answered
Chosen Option : --

Q.26 'Freedom is my birth right and I shall have it'. Who among the following said this?

- Ans 1. Lala Lajpat Rai
 2. Bal Gangadhar Tilak
 3. Aurobindo Ghosh
 4. Bipin Chandra pal

Question ID : 264330114872
Option 1 ID : 264330451575
Option 2 ID : 264330451574
Option 3 ID : 264330451576
Option 4 ID : 264330451573
Status : Answered
Chosen Option : 3

Q.27 The first battle of Panipat was fought between Babur and _____ .

- Ans 1. Ibrahim Lodhi
 2. Maharana Pratap
 3. Muhammad bin Tughlaq
 4. Sikandar Lodhi

Question ID : 264330118984
Option 1 ID : 264330466593
Option 2 ID : 264330466594
Option 3 ID : 264330466592
Option 4 ID : 264330466591
Status : Answered
Chosen Option : 1

Q.28 The period between two FIFA Football World Cups is _____.

- Ans 1. 3 years
 2. 5 years
 3. 4 years
 4. 6 years

Question ID : 264330134259
Option 1 ID : 264330526031
Option 2 ID : 264330526033
Option 3 ID : 264330526032
Option 4 ID : 264330526034
Status : Answered
Chosen Option : 3

Q.29 Ajita Srivastava is a famous folk singer from _____ and she received the Padma Shri in 2022.

- Ans 1. Maharashtra
 2. Gujarat
 3. Madhya Pradesh
 4. Uttar Pradesh

Question ID : 264330111960
Option 1 ID : 264330439927
Option 2 ID : 264330439928
Option 3 ID : 264330439925
Option 4 ID : 264330439926
Status : Not Answered
Chosen Option : --

Q.30 The Katakhal, Jiri, Chiri, Modhura, Longai, Sonai, Rukni and Singla are the main tributaries of which river?

- Ans 1. Chambal
 2. Barak
 3. Damodar
 4. Ghaghra

Question ID : 264330113523
Option 1 ID : 264330446179
Option 2 ID : 264330446177
Option 3 ID : 264330446178
Option 4 ID : 264330446180
Status : Not Answered
Chosen Option : --

Q.31 In India, which mode of transport provide door to door services?

- Ans 1. Waterways
 2. Road transport
 3. Railways
 4. Airways

Question ID : 264330119885
Option 1 ID : 264330469816
Option 2 ID : 264330469818
Option 3 ID : 264330469815
Option 4 ID : 264330469817
Status : Not Answered
Chosen Option : --

Q.32 A novel based on the story of a family named 'Fasting, Feasting' was written by whom among the following?

- Ans 1. Anita Desai
 2. Arundhati Roy
 3. Arvind Adiga
 4. Kiran Desai

Question ID : 26433064228
Option 1 ID : 264330251507
Option 2 ID : 264330251504
Option 3 ID : 264330251506
Option 4 ID : 264330251505
Status : Answered
Chosen Option : 3

Q.33 Pradhan Mantri Awas Yojana–Urban (PMAY-U) was launched in the year _____ by the Government of India.

- Ans 1. 2021
 2. 2015
 3. 2017
 4. 2019

Question ID : 264330120480
Option 1 ID : 264330472174
Option 2 ID : 264330472171
Option 3 ID : 264330472172
Option 4 ID : 264330472173
Status : Answered
Chosen Option : 4

Q.34 Which of the following Articles of the Indian Constitution is related with provision for just and humane conditions of work and maternity relief?

- Ans 1. Article 42
 2. Article 45
 3. Article 44
 4. Article 43

Question ID : 264330180058
Option 1 ID : 264330706215
Option 2 ID : 264330706218
Option 3 ID : 264330706217
Option 4 ID : 264330706216
Status : Answered
Chosen Option : 4

Q.35 Article 39A of the Constitution of India gives the idea of:

- Ans
- 1. right to work, to education and to public assistance in certain cases
 - 2. provisions for just and humane conditions of work
 - 3. living wage, etc., for workers
 - 4. equal justice and free legal aid

Question ID : 264330110802
Option 1 ID : 264330435487
Option 2 ID : 264330435485
Option 3 ID : 264330435488
Option 4 ID : 264330435486
Status : Answered
Chosen Option : 4

Q.36 Who is the Head of the Secretariat of each house of the Parliament?

- Ans
- 1. Speaker
 - 2. Secretary General
 - 3. President
 - 4. Deputy Speaker

Question ID : 264330173533
Option 1 ID : 264330680611
Option 2 ID : 264330680612
Option 3 ID : 264330680614
Option 4 ID : 264330680613
Status : Answered
Chosen Option : 3

Q.37 According to the census of India 2011, which group of states from the following recorded the highest population?

- Ans
- 1. Maharashtra and Bihar
 - 2. Tamil Nadu and Karnataka
 - 3. West Bengal and Madhya Pradesh
 - 4. Bihar and West Bengal

Question ID : 264330167028
Option 1 ID : 264330655116
Option 2 ID : 264330655118
Option 3 ID : 264330655115
Option 4 ID : 264330655117
Status : Answered
Chosen Option : 1

Q.38 Which of the following dances of South India is known as peacock dance?

- Ans
- 1. Garadi
 - 2. Padayani
 - 3. Mayilattam
 - 4. Kummi

Question ID : 264330110423
Option 1 ID : 264330433972
Option 2 ID : 264330433969
Option 3 ID : 264330433970
Option 4 ID : 264330433971
Status : Not Answered
Chosen Option : --

Q.39 Which of the following statements about Indian river systems is correct?

- Ans
- 1. The Mahanadi river flows through the state of Chhattisgarh only.
 - 2. Godavari river flows through Haryana state.
 - 3. Yamuna River is a tributary of Ganga River.
 - 4. Sone River originates in Punjab.

Question ID : 264330174350
Option 1 ID : 264330683819
Option 2 ID : 264330683821
Option 3 ID : 264330683822
Option 4 ID : 264330683820
Status : Answered
Chosen Option : 1

Q.40 Which of the following statements is true with regard to preference given in most Five-Year Plans in India?

- Ans
- 1. Extensive Promotion of private sector entrepreneurship
 - 2. Control of prices
 - 3. Regulation of financial sector
 - 4. Investment in basic and heavy industries

Question ID : 264330113540
Option 1 ID : 264330446246
Option 2 ID : 264330446247
Option 3 ID : 264330446248
Option 4 ID : 264330446245
Status : Answered
Chosen Option : 4

Q.41 When was Singer and Nicolson's fluid mosaic model accepted as the foundational model for the interpretation of existing data on membrane proteins and lipids, and their dynamics?

- Ans
- 1. 1952
 - 2. 1972
 - 3. 1942
 - 4. 1982

Question ID : 264330141717
Option 1 ID : 264330555188
Option 2 ID : 264330555187
Option 3 ID : 264330555190
Option 4 ID : 264330555189
Status : Answered
Chosen Option : 1

Q.42 How many temples and monasteries are there in Ellora caves?

- Ans
- 1. 18
 - 2. 29
 - 3. 34
 - 4. 23

Question ID : 264330106253
Option 1 ID : 264330417314
Option 2 ID : 264330417313
Option 3 ID : 264330417316
Option 4 ID : 264330417315
Status : Answered
Chosen Option : 1

Q.43 Which of the following gave the British Indian government enormous powers to repress political activities, and allowed the detention of political prisoners without trial for two years?

- Ans
- 1. Indian Slavery Act
 - 2. Rowlatt Act
 - 3. Indian Contract Act
 - 4. Negotiable Instruments Act

Question ID : 264330119489
Option 1 ID : 264330468240
Option 2 ID : 264330468242
Option 3 ID : 264330468241
Option 4 ID : 264330468239
Status : Answered
Chosen Option : 2

Q.44 Autotrophs can fix _____.

- Ans
- 1. carbon dioxides
 - 2. carbon monoxide
 - 3. methane
 - 4. oxygen

Question ID : 264330120070
Option 1 ID : 264330470537
Option 2 ID : 264330470536
Option 3 ID : 264330470538
Option 4 ID : 264330470535
Status : Not Answered
Chosen Option : --

Q.45 Who among the following was the first President of the Indian Olympic Association (IOA)?

- Ans
- 1. Sir Dorabji Tata
 - 2. Dr. AG Noehren
 - 3. Raja Bhalender Singh
 - 4. Maharaja Bhupinder Singh

Question ID : 264330118442
Option 1 ID : 264330465171
Option 2 ID : 264330465169
Option 3 ID : 264330465172
Option 4 ID : 264330465170
Status : Not Answered
Chosen Option : --

Q.46 Ram Sahay Panday got Padma Shri for promoting the dance form "Raai" from Bundelkhand region. Which State does this dance form belong to?

- Ans
- 1. Rajasthan
 - 2. Madhya Pradesh
 - 3. Bihar
 - 4. Chhattisgarh

Question ID : 2643308666
Option 1 ID : 264330340308
Option 2 ID : 264330340305
Option 3 ID : 264330340307
Option 4 ID : 264330340306
Status : Answered
Chosen Option : 2

Q.47 Reserve Bank of India (RBI) was established on:

- Ans
- 1. 1 April 1945
 - 2. 1 April 1925
 - 3. 1 April 1955
 - 4. 1 April 1935

Question ID : 264330110162
Option 1 ID : 264330432927
Option 2 ID : 264330432925
Option 3 ID : 264330432928
Option 4 ID : 264330432926
Status : Answered
Chosen Option : 4

Q.48 निम्नलिखित में से किसने मध्य भारत में चमड़ा श्रमिकों की बेहतरी के लिए सतनामी आंदोलन शुरू किया था?

- Ans
- 1. बी.आर. अंबेडकर
 - 2. महात्मा गांधी
 - 3. गुरु घासीदास
 - 4. स्वामी विवेकानंद

Question ID : 264330119024
Option 1 ID : 264330466751
Option 2 ID : 264330466752
Option 3 ID : 264330466754
Option 4 ID : 264330466753
Status : Answered
Chosen Option : 3

Q.49 In a volleyball game, 'libero' is a _____.

- Ans
- 1. specialised defensive player
 - 2. blocking expert
 - 3. specialised attacking player
 - 4. smashing expert

Question ID : 264330118484
Option 1 ID : 264330465337
Option 2 ID : 264330465339
Option 3 ID : 264330465340
Option 4 ID : 264330465338
Status : Not Answered
Chosen Option : --

Q.50 The parliamentary system of the Government in India is based on the pattern of which of the following Parliamentary Governments?

- Ans
- 1. Russian
 - 2. Canadian
 - 3. USA
 - 4. British

Question ID : 264330173469
 Option 1 ID : 264330680357
 Option 2 ID : 264330680356
 Option 3 ID : 264330680355
 Option 4 ID : 264330680358
 Status : Not Answered
 Chosen Option : --

Section : Reasoning

Q.1 Which figure should replace the question mark (?) if the series were to be continued?

O 8	8 =	X O	O A	
= A	O ▽	A 8	X ▽	?
X ▽	A X	= ▽	8 =	

Ans

- 1.

= 8
▽ X
A O
- 2.

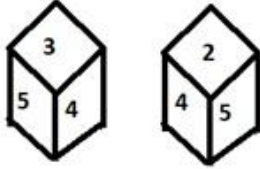
= 8
O A
▽ X
- 3.

= X
8 O
A ▽
- 4.

= 8
X O
A ▽

Question ID : 264330130801
 Option 1 ID : 264330512317
 Option 2 ID : 264330512316
 Option 3 ID : 264330512315
 Option 4 ID : 264330512318
 Status : Answered
 Chosen Option : 2

Q.2 Six numbers 1, 2, 3, 4, 5 and 6 are written on different faces of a dice. Two positions of this dice are shown in the figure. Find the number on the face opposite to 2.



Ans 1. 3

2. 4

3. 1

4. 6

Question ID : 264330117893

Option 1 ID : 264330463389

Option 2 ID : 264330463388

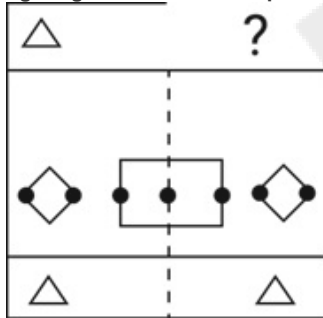
Option 3 ID : 264330463387

Option 4 ID : 264330463390

Status : Answered

Chosen Option : 3

Q.3 Select the figure from the given options that will replace the question mark (?) in the figure given below to complete the pattern.



Ans

1.

2.

3.

4.

Question ID : 264330116613

Option 1 ID : 264330458540

Option 2 ID : 264330458537

Option 3 ID : 264330458539

Option 4 ID : 264330458538

Status : Answered

Chosen Option : 2

Q.4 Which two signs should be interchanged to make the given equation correct?

$$156 \div 12 - 4 \times 65 + 87 = 74$$

- Ans
- 1. + and -
 - 2. = and \times
 - 3. \times and -
 - 4. + and =

Question ID : 26433090221

Option 1 ID : 264330354361

Option 2 ID : 264330354364

Option 3 ID : 264330354362

Option 4 ID : 264330354363

Status : Answered

Chosen Option : 3

Q.5 छह दोस्त - A, B, C, D, E और F - एक वृत्ताकार मेज के परितः मेज के केंद्र की ओर मुख करके बैठे थे। वे एक दूसरे से समान दूरी पर बैठे थे। A, B के दाएं तीसरे स्थान पर बैठा था। E, D के ठीक बाएं बैठा था। A, F और D के ठीक बीच में बैठा था। निम्नलिखित में से कौन D के बाएं तीसरे स्थान पर बैठा था?

- Ans
- 1. C
 - 2. E
 - 3. A
 - 4. F

Question ID : 26433087005

Option 1 ID : 264330341661

Option 2 ID : 264330341663

Option 3 ID : 264330341664

Option 4 ID : 264330341662

Status : Answered

Chosen Option : 1

Q.6 Select the set in which the numbers are related in the same way as are the numbers of the following sets.

(NOTE : Operations should be performed on the whole numbers, without breaking down the numbers into its constituent digits. E.g. 13 – Operations on 13 such as adding/deleting/multiplying etc. to 13 can be performed. Breaking down 13 into 1 and 3 and then performing mathematical operations on 1 and 3 is NOT allowed)

(39, 130, 13)
(45, 150, 15)

- Ans
- 1. (39, 120, 17)
 - 2. (25, 60, 12)
 - 3. (35, 125, 10)
 - 4. (40, 75, 15)

Question ID : 26433097437

Option 1 ID : 264330382439

Option 2 ID : 264330382437

Option 3 ID : 264330382440

Option 4 ID : 264330382438

Status : Not Answered

Chosen Option : --

Q.7 Which of the following terms will replace the question mark (?) in the given series?
MAF, PCG, SEH, ?, YIJ

- Ans
- 1. UFI
 - 2. RHI
 - 3. WHI
 - 4. VGI

Question ID : 264330102169
 Option 1 ID : 264330401143
 Option 2 ID : 264330401141
 Option 3 ID : 264330401144
 Option 4 ID : 264330401142
 Status : Answered
 Chosen Option : 4

Q.8 Which figure should replace the question mark (?) in the following series to continue the pattern?

D	Z	V	□	D	V	V	□	D	=	V	D	
=				Z		Z				□		?
□				=		=				Z		

Ans

- 1.

D	Z	=
	V	
		□
- 2.

D	=	V
		□
		Z
- 3.

D	=	V
		Z
		□
- 4.

=	Z	D
		V
		□

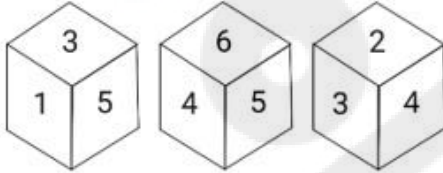
Question ID : 264330129629
 Option 1 ID : 264330507883
 Option 2 ID : 264330507882
 Option 3 ID : 264330507885
 Option 4 ID : 264330507884
 Status : Answered
 Chosen Option : 2

Q.9 In a certain code language, 'WAR' is written as '39' and 'ZIP' is written as '30'. How will 'YES' be written in that language?

- Ans 1. 36
 2. 34
 3. 32
 4. 37

Question ID : 26433089410
Option 1 ID : 264330351143
Option 2 ID : 264330351142
Option 3 ID : 264330351141
Option 4 ID : 264330351144
Status : Answered
Chosen Option : 3

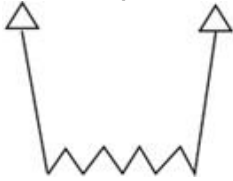
Q.10 Three different positions of the same dice are shown. Find the number on the face opposite to the face showing '4'.



- Ans 1. 2
 2. 5
 3. 6
 4. 1

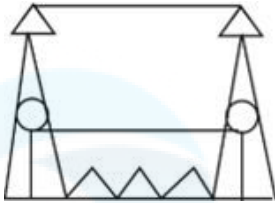
Question ID : 264330112034
Option 1 ID : 264330440223
Option 2 ID : 264330440221
Option 3 ID : 264330440222
Option 4 ID : 264330440224
Status : Answered
Chosen Option : 4

Q.11 Select the option in which the given figure is embedded (rotation is NOT allowed).

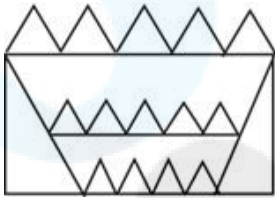


Ans

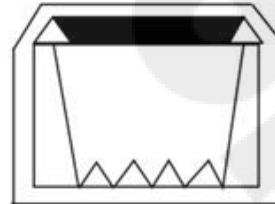
✗ 1.



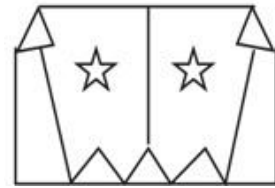
✗ 2.



✓ 3.



✗ 4.



Question ID : 264330111676

Option 1 ID : 264330438792

Option 2 ID : 264330438790

Option 3 ID : 264330438791

Option 4 ID : 264330438789

Status : Answered

Chosen Option : 3

Q.12 Read the given statements and conclusions carefully. Assuming that the information given in the statements is true, even if it appears to be at variance with commonly known facts, decide which of the given conclusions logically follow(s) from the statements.

Statements:

Some shoes are shirts.

All shirts are jackets.

Conclusions:

I. Some shoes are jackets.

II. All jackets are shoes.

Ans ✗ 1. Only conclusion II follows

✓ 2. Only conclusion I follows

✗ 3. Neither conclusion I nor II follows

✗ 4. Both conclusions I and II follow

Question ID : 26433068293

Option 1 ID : 264330267685

Option 2 ID : 264330267684

Option 3 ID : 264330267687

Option 4 ID : 264330267686

Status : Answered

Chosen Option : 2


Q.13 Select the option that is related to the fourth number in the same way as the first number is related to the second number and the fifth number is related to the sixth number.

17 : 69 :: ? : 109 :: 21 : 85

- Ans
- 1. 40
 - 2. 27
 - 3. 37
 - 4. 31

Question ID : 26433052023
Option 1 ID : 264330203397
Option 2 ID : 264330203394
Option 3 ID : 264330203396
Option 4 ID : 264330203395
Status : Answered
Chosen Option : 2

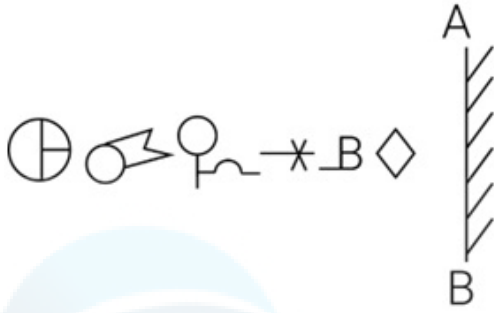
Q.14 How many triangles are there in the given figure?



- Ans
- 1. 30
 - 2. 28
 - 3. 24
 - 4. 32

Question ID : 26433080664
Option 1 ID : 264330316591
Option 2 ID : 264330316590
Option 3 ID : 264330316592
Option 4 ID : 264330316589
Status : Answered
Chosen Option : 1

Q.15 Select the correct mirror image of the given figure when the mirror is placed at 'AB' as shown.



Ans

- 1.
- 2.
- 3.
- 4.

Question ID : 264330114698

Option 1 ID : 264330450880

Option 2 ID : 264330450877

Option 3 ID : 264330450879

Option 4 ID : 264330450878

Status : Answered

Chosen Option : 3

Q.16 Three different positions of the same dice are shown, the faces of which are marked with the letters A, B, C, D, E and F. Select the letter that will be on the face opposite to the face having the letter 'D'.



Ans

- 1. F
- 2. A
- 3. C
- 4. B

Question ID : 264330117422

Option 1 ID : 264330461732

Option 2 ID : 264330461729

Option 3 ID : 264330461731

Option 4 ID : 264330461730

Status : Answered

Chosen Option : 1

Q.17 Select the option that is related to the fifth letter cluster in the same way as the second letter cluster is related to the first letter cluster and the fourth letter cluster is related to the third letter cluster.

YDVJ : PHMN :: FJBE : WNSI :: PXYS : ?

- Ans
- 1. PLEX
 - 2. GMNA
 - 3. JFBT
 - 4. GBPW

Question ID : 26433074692

Option 1 ID : 264330292856

Option 2 ID : 264330292859

Option 3 ID : 264330292857

Option 4 ID : 264330292858

Status : Answered

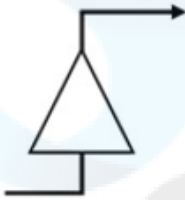
Chosen Option : 4

Q.18 Select the option that is embedded in the given figure (rotation is NOT allowed).

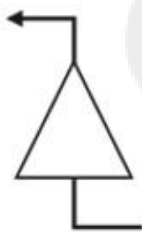


Ans

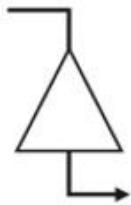
✗ 1.



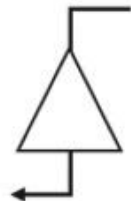
✗ 2.



✓ 3.



✗ 4.



Question ID : 26433082892

Option 1 ID : 264330325402

Option 2 ID : 264330325404

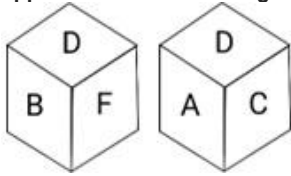
Option 3 ID : 264330325401

Option 4 ID : 264330325403

Status : Answered

Chosen Option : 3

Q.19 Six letters A, B, C, D, E and F are written on different faces of a dice. Two different positions of this dice are shown in the figure. Select the letter that will be on the face opposite to the one having E.



Ans 1. D

2. C

3. F

4. A

Question ID : 264330121788

Option 1 ID : 264330477323

Option 2 ID : 264330477325

Option 3 ID : 264330477326

Option 4 ID : 264330477324

Status : Answered

Chosen Option : 1

Q.20 Select the number from the given options that can replace the question mark (?) in the following series.
40, 50, 30, 60, 20, ?

Ans 1. 40

2. 70

3. 50

4. 80

Question ID : 264330106384

Option 1 ID : 264330417840

Option 2 ID : 264330417838

Option 3 ID : 264330417839

Option 4 ID : 264330417837

Status : Answered

Chosen Option : 2

Q.21 Which figure should replace the question mark (?) if the following series were to be continued?

L O T R = M A D E	R T = E O L D A M	S R T = E O L D A	= T E A R S D L O	4 = T E A R S D L	?
-------------------------	-------------------------	-------------------------	-------------------------	-------------------------	---

Ans

✗ 1.

R T A 4 = L D S E

✓ 2.

E T A L = 4 D S R

✗ 3.

E T A 4 = L R S D

✗ 4.

L 4 = T E A R S D

Question ID : 264330103895

Option 1 ID : 264330407882

Option 2 ID : 264330407884

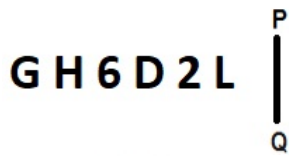
Option 3 ID : 264330407883

Option 4 ID : 264330407881

Status : Answered

Chosen Option : 2

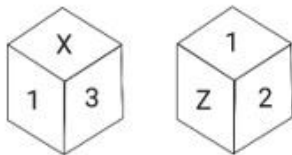
Q.22 Select the correct mirror image of the given figure when the mirror is placed at PQ as shown below.



- Ans
- 1. G H 6 D 2 L
 - 2. J S D 6 H 9
 - 3. J Z D 9 H 9
 - 4. J S D 9 H 9

Question ID : 26433080771
 Option 1 ID : 264330317017
 Option 2 ID : 264330317018
 Option 3 ID : 264330317020
 Option 4 ID : 264330317019
 Status : Answered
 Chosen Option : 4

Q.23 Three numbers, 1, 2 and 3, and three letters, X, Y and Z, are written on the different faces of a dice. Two positions of this dice are shown in the given figure. Find the letter/number on the face opposite to Y.



- Ans
- 1. X
 - 2. Z
 - 3. 3
 - 4. 1

Question ID : 264330116608
 Option 1 ID : 264330458520
 Option 2 ID : 264330458519
 Option 3 ID : 264330458518
 Option 4 ID : 264330458517
 Status : Answered
 Chosen Option : 4

Q.24 Select the correct mirror image of the given figure when the mirror is placed at PQ as shown below.

//\|||=+&%((()\$)) P
|
Q

Ans

- ✗ 1. (((\$()))\^0\$+=//||\|\|
- ✗ 2. (((\$))((\^0\$+=||/\|\|
- ✓ 3. (((\$()))\^0\$+=||/\|\|
- ✗ 4. (((\$()))\^0\$+=||//\|\|

Question ID : 26433082028
 Option 1 ID : 264330321947
 Option 2 ID : 264330321945
 Option 3 ID : 264330321946
 Option 4 ID : 264330321948

Status : Answered

Chosen Option : 3

Q.25 Select the correct combination of mathematical signs that can sequentially replace the * signs and balance the given expression.

$$13 * 7 * 32 * 56 * 4 * 73$$

- Ans
- ✗ 1. +, ×, -, ÷, =
- ✓ 2. ×, -, +, ÷, =
- ✗ 3. -, +, +, ×, =
- ✗ 4. -, ×, +, +, =

Question ID : 26433074788
 Option 1 ID : 264330293242
 Option 2 ID : 264330293240
 Option 3 ID : 264330293241
 Option 4 ID : 264330293243

Status : Answered

Chosen Option : 2

Q.1

What is the value of $\frac{0.061 \times 0.061 \times 0.061 + 0.031 \times 0.031 \times 0.031}{0.061 \times 0.061 - 0.061 \times 0.031 + 0.031 \times 0.031}$?

- Ans
- 1. 0.092
 - 2. 0.0081
 - 3. 0.27
 - 4. 1.8

Question ID : 264330104342
Option 1 ID : 264330409669
Option 2 ID : 264330409670
Option 3 ID : 264330409671
Option 4 ID : 264330409672
Status : Answered
Chosen Option : 1

Q.2 A, B and C can complete a piece of work in 8, 10 and 12 days, respectively. In how many days would all of them complete the same work, working together?

- Ans
- 1. $\frac{123}{37}$ days
 - 2. $\frac{120}{37}$ days
 - 3. $\frac{130}{37}$ days
 - 4. $\frac{128}{37}$ days

Question ID : 264330103628
Option 1 ID : 264330406819
Option 2 ID : 264330406820
Option 3 ID : 264330406817
Option 4 ID : 264330406818
Status : Not Answered
Chosen Option : --

Q.3 A solid copper sphere of diameter 30 cm is drawn into a wire of diameter 10 cm. Find the length of the wire (in cm).

- Ans
- 1. 180
 - 2. 120
 - 3. 240
 - 4. 300

Question ID : 264330112445
Option 1 ID : 264330441868
Option 2 ID : 264330441865
Option 3 ID : 264330441866
Option 4 ID : 264330441867
Status : Answered
Chosen Option : 4

Q.4 If 45% of Ram's money is added to 50% of Soham's money, then the total amount will be 86% of Soham's money. What percentage of Ram's money did Soham have?

- Ans
- 1. 137%
 - 2. 85%
 - 3. 125%
 - 4. 95%

Question ID : 264330131332
Option 1 ID : 264330514442
Option 2 ID : 264330514439
Option 3 ID : 264330514440
Option 4 ID : 264330514441
Status : Not Answered
Chosen Option : --

Q.5 What is the product of the 5th prime number and the prime number immediately greater than 100?

- Ans
- 1. 1067
 - 2. 1717
 - 3. 1111
 - 4. 1261

Question ID : 264330104345
Option 1 ID : 264330409681
Option 2 ID : 264330409684
Option 3 ID : 264330409682
Option 4 ID : 264330409683
Status : Answered
Chosen Option : 3

Q.6 A person borrows ₹5,000 for 2 years at 4% p.a. simple interest. He immediately lends it to another person at $\frac{25}{4}$ % p.a. for 2 years. Find his gain (in ₹) in the transaction.

- Ans
- 1. 225
 - 2. 250
 - 3. 275
 - 4. 200

Question ID : 264330119421
Option 1 ID : 264330467971
Option 2 ID : 264330467972
Option 3 ID : 264330467974
Option 4 ID : 264330467973
Status : Not Answered
Chosen Option : --

Q.7 The initial population of a country is 1,87,500. If the birth and the death rates are 13% and 9%, respectively, then find the population of the country after 2 years.

- Ans
- 1. 2,02,700
 - 2. 2,02,900
 - 3. 2,03,000
 - 4. 2,02,800

Question ID : 264330106009
Option 1 ID : 264330416337
Option 2 ID : 264330416339
Option 3 ID : 264330416340
Option 4 ID : 264330416338
Status : Not Answered
Chosen Option : --

Q.8 A trip to a destination is made in the following way:
a) 550 km by train at an average speed of 55 km/h
b) 4500 km by plane at an average speed of 500 km/h
c) 400 km by boat at an average speed of 25 km/h
d) 55 km by auto at an average speed of 35 km/h
What is the average speed for the entire journey?

- Ans
- 1. 3300 km/h
 - 2. 9600 km/h
 - 3. $121 \frac{64}{25}$ km/h
 - 4. $150 \frac{135}{256}$ km/h

Question ID : 264330118133
Option 1 ID : 264330464350
Option 2 ID : 264330464348
Option 3 ID : 264330464349
Option 4 ID : 264330464347
Status : Not Answered
Chosen Option : --

Q.9 If k , $(k^2 + 3)$ and $(k^3 + 5)$ are prime numbers, then what will be the value of k ?

- Ans
- 1. 4
 - 2. 3
 - 3. 7
 - 4. 2

Question ID : 264330104277
Option 1 ID : 264330409410
Option 2 ID : 264330409411
Option 3 ID : 264330409409
Option 4 ID : 264330409412
Status : Answered
Chosen Option : 3

Q.10 If the price of tea goes up by 28%, then by what percentage (correct to the nearest whole number) should its consumption be reduced so that the expenditure on it remains unchanged?

- Ans 1. 22%
 2. 27%
 3. 21%
 4. 28%

Question ID : 264330118051
Option 1 ID : 264330464019
Option 2 ID : 264330464021
Option 3 ID : 264330464022
Option 4 ID : 264330464020
Status : Not Answered
Chosen Option : --

Q.11 What is the area of a triangle (in "cm²") having sides of length 24 cm, 17 cm and 9 cm?

- Ans 1. $40\sqrt{2}$
 2. $35\sqrt{2}$
 3. $20\sqrt{2}$
 4. $40\sqrt{3}$

Question ID : 264330126533
Option 1 ID : 264330495807
Option 2 ID : 264330495806
Option 3 ID : 264330495805
Option 4 ID : 264330495804
Status : Not Answered
Chosen Option : --

Q.12 If marked price is 75% more than the cost price and a discount of 40% is allowed on the marked price, then percentage profit is:

- Ans 1. 5%
 2. 8%
 3. 3%
 4. 7%

Question ID : 264330126187
Option 1 ID : 264330494423
Option 2 ID : 264330494421
Option 3 ID : 264330494422
Option 4 ID : 264330494420
Status : Not Answered
Chosen Option : --

Q.13 Find the average of the first five composite numbers.

- Ans
- 1. 7.8
 - 2. 6.8
 - 3. 8.2
 - 4. 7.4

Question ID : 264330131439
Option 1 ID : 264330514861
Option 2 ID : 264330514859
Option 3 ID : 264330514862
Option 4 ID : 264330514860
Status : Not Answered
Chosen Option : --

Q.14 A vertical pole of length 8.3 m casts a shadow of length 4.15 m. Find the height of the tree that casts a 40 m long shadow under similar conditions (in m).

- Ans
- 1. 60
 - 2. 70
 - 3. 100
 - 4. 80

Question ID : 264330168549
Option 1 ID : 264330661009
Option 2 ID : 264330661008
Option 3 ID : 264330661007
Option 4 ID : 264330661010
Status : Not Answered
Chosen Option : --

Q.15 Arun bought 150 guavas for ₹525 and sold them at the rate of ₹36 per dozen. What is the profit or loss percentage of Arun (correct up to two decimal places)?

- Ans
- 1. 16.67% Loss
 - 2. 14.29% Profit
 - 3. 16.67% Profit
 - 4. 14.29% Loss

Question ID : 264330103952
Option 1 ID : 264330408112
Option 2 ID : 264330408109
Option 3 ID : 264330408111
Option 4 ID : 264330408110
Status : Not Answered
Chosen Option : --

Q.1 Which of the following is the foundation of data communication on the web, enabling the transfer of web page content?

- Ans 1. Hypertext Transfer Protocol
 2. Domain Name Server
 3. World Wide Web
 4. Uniform Resource Locator

Question ID : 264330180801
Option 1 ID : 264330709167
Option 2 ID : 264330709169
Option 3 ID : 264330709168
Option 4 ID : 264330709170
Status : Answered
Chosen Option : 1

Q.2 एमएस वर्ड 365 (MS Word 365) से संबंधित निम्न कथनों के आधार पर कौन-सा विकल्प सही है?

- 1) Ctrl + X का उपयोग डॉक्यूमेंट को कॉपी करने के लिए किया जाता है।
2) Ctrl+V का उपयोग डॉक्यूमेंट को मूव करने के लिए किया जाता है।

- Ans 1. दोनों (1) और (2)
 2. केवल (1)
 3. न तो (1) और न ही (2)
 4. केवल (2)

Question ID : 264330175969
Option 1 ID : 264330690173
Option 2 ID : 264330690171
Option 3 ID : 264330690174
Option 4 ID : 264330690172
Status : Answered
Chosen Option : 2

Q.3 Which of the following shortcut keys is used in MS Excel 365 to make the cell in edit mode, allowing you to make changes?

- Ans 1. Ctrl + F1
 2. F1
 3. F2
 4. Ctrl + F2

Question ID : 264330180413
Option 1 ID : 264330707622
Option 2 ID : 264330707621
Option 3 ID : 264330707620
Option 4 ID : 264330707619
Status : Answered
Chosen Option : 4

Q.4 एमएस एक्सेल 365 (MS Excel 365) का निम्नलिखित में से कौन-सा फ़ंक्शन, प्रत्येक वैल्यू (value) के बीच एक स्पेस को छोड़ते हुए अनियमित स्पेस को हटाता है?

- Ans
- 1. AVERAGE
 - 2. SUM
 - 3. VLOOKUP
 - 4. TRIM

Question ID : 264330180405
Option 1 ID : 264330707589
Option 2 ID : 264330707587
Option 3 ID : 264330707590
Option 4 ID : 264330707588
Status : Not Answered
Chosen Option : --

Q.5 MS-Word 365 में निम्नलिखित में से किस विकल्प से आप चयनित टेक्स्ट के फ़ॉन्ट साइज़ को, फ़ॉन्ट साइज़ सूची में उपलब्ध अगले बड़े साइज़ में परिवर्तित कर सकते हैं?

- Ans
- 1. इटैलिक्स
 - 2. बोल्ड
 - 3. फ़ॉन्ट साइज़ बढ़ाएँ
 - 4. फ़ॉन्ट साइज़ कम करें

Question ID : 264330173354
Option 1 ID : 264330679898
Option 2 ID : 264330679897
Option 3 ID : 264330679895
Option 4 ID : 264330679896
Status : Answered
Chosen Option : 3

Q.6 In MS Excel 365, what is the term for the area that contains specific and formatted data in MS Excel for printing?

- Ans
- 1. View
 - 2. Print preview
 - 3. Print area
 - 4. Print margin

Question ID : 264330182119
Option 1 ID : 264330714315
Option 2 ID : 264330714317
Option 3 ID : 264330714318
Option 4 ID : 264330714316
Status : Answered
Chosen Option : 3

Q.7 In MS Word 365 What is the primary purpose of using bullets and numbering in document formatting?

- Ans
- 1. To indicate the importance of specific text.
 - 2. To organize information into lists or sequences.
 - 3. To adjust the margins and spacing of the document.
 - 4. To highlight text with a different font or colour.

Question ID : 264330173328

Option 1 ID : 264330679791

Option 2 ID : 264330679792

Option 3 ID : 264330679794

Option 4 ID : 264330679793

Status : Answered

Chosen Option : 3

Q.8 Which of the following is an example of a table style in Microsoft Word 365?

- Ans
- 1. Chicago Manual of Style
 - 2. Plain Grid
 - 3. MLA (Modern Language Association)
 - 4. APA (American Psychological Association)

Question ID : 264330174492

Option 1 ID : 264330684389

Option 2 ID : 264330684390

Option 3 ID : 264330684387

Option 4 ID : 264330684388

Status : Not Answered

Chosen Option : --

Q.9 निम्नलिखित में से कौन-सा, यूजर्स के बीच संदेशों के आदान-प्रदान के लिए एक कंप्यूटर-आधारित एप्लिकेशन है?

- Ans
- 1. ई-मेल (Email)
 - 2. क्रोम (chrome)
 - 3. बिंग (Bing)
 - 4. मोज़िला (Mozilla)

Question ID : 264330180792

Option 1 ID : 264330709131

Option 2 ID : 264330709132

Option 3 ID : 264330709133

Option 4 ID : 264330709134

Status : Answered

Chosen Option : 1

Q.10 नया खाली डॉक्यूमेंट बनाने का तरीका निम्नलिखित में से कौन-सा है?

- Ans
- 1. एमएस-एक्सेल
 - 2. एमएस आउटलुक
 - 3. एमएस-पावरप्वाइंट
 - 4. एमएस-वर्ड

Question ID : 264330178284

Option 1 ID : 264330699191

Option 2 ID : 264330699194

Option 3 ID : 264330699193

Option 4 ID : 264330699192

Status : Not Answered

Chosen Option : --

Part 9000
Online