

## Constable Executive Male and Female in Delhi Police Examination 2023

Roll Number	
Candidate Name	
Venue Name	
Exam Date	14/11/2023
Exam Time	3:00 PM - 4:30 PM
Subject	Constable Executive Male and Female in Delhi Police Examination 2023

### Section : General Knowledge

**Q.1** Cashpor Micro credit is a company that does NOT operate in the most backward districts of \_\_\_\_\_.

- Ans
- 1. Bihar
  - 2. Chhattisgarh
  - 3. Telangana
  - 4. Jharkhand

Question ID : 264330116497  
Option 1 ID : 264330458073  
Option 2 ID : 264330458076  
Option 3 ID : 264330458075  
Option 4 ID : 264330458074  
Status : Not Answered  
Chosen Option : --

**Q.2** Which Article of the Constitution of India states that the President shall appoint judges of the Supreme Court under his hand and seal after consultation with such of the judges of the Supreme Court as the President may deem necessary?

- Ans
- 1. Article 124 (2)
  - 2. Article 120 (2)
  - 3. Article 134 (2)
  - 4. Article 142(2)

Question ID : 264330110826  
Option 1 ID : 264330435584  
Option 2 ID : 264330435582  
Option 3 ID : 264330435581  
Option 4 ID : 264330435583  
Status : Answered  
Chosen Option : 1

**Q.3** Which of the following was replaced by the Green Revolution?

- Ans
- 1. Use of inorganic manures
  - 2. Use of seeds supplied by the government
  - 3. Use of groundwater for irrigation
  - 4. Use of organic manures

Question ID : 264330111765  
Option 1 ID : 264330439146  
Option 2 ID : 264330439148  
Option 3 ID : 264330439147  
Option 4 ID : 264330439145  
Status : Answered  
Chosen Option : 4

Q.4 According to Census of India 2011, the growth rate of Hindu population in the decade 2001-2011 was \_\_\_\_\_.

- Ans
- 1. 10.0%
  - 2. 16.8%
  - 3. 20.1%
  - 4. 8.6%

Question ID : 264330179510  
Option 1 ID : 264330704039  
Option 2 ID : 264330704040  
Option 3 ID : 264330704041  
Option 4 ID : 264330704042  
Status : Not Answered  
Chosen Option : --

Q.5 In which of the following years Cripps Mission offered Dominion Status to India?

- Ans
- 1. 1942
  - 2. 1934
  - 3. 1939
  - 4. 1945

Question ID : 264330118600  
Option 1 ID : 264330465651  
Option 2 ID : 264330465654  
Option 3 ID : 264330465653  
Option 4 ID : 264330465652  
Status : Answered  
Chosen Option : 1

Q.6 किस सिंड्रोम के कारण कंधों के बीच एक मोटा कूबड़, एक गोल चेहरा और त्वचा पर गुलाबी या बैंगनी खिंचाव के निशान हो जाते हैं?

- Ans
- 1. डाउन सिंड्रोम (Down syndrome)
  - 2. एंजेलमैन सिंड्रोम (Angelman syndrome)
  - 3. कुशिंग सिंड्रोम (Cushing syndrome)
  - 4. मार्फन सिंड्रोम (Marfan syndrome)

Question ID : 264330130986  
Option 1 ID : 264330513056  
Option 2 ID : 264330513055  
Option 3 ID : 264330513057  
Option 4 ID : 264330513058  
Status : Not Answered  
Chosen Option : --

Q.7 After independence, who had complete control over the established industries?

- Ans
- 1. Private sector
  - 2. Foreign investors
  - 3. Britishers
  - 4. Government

Question ID : 264330174149  
Option 1 ID : 264330683038  
Option 2 ID : 264330683036  
Option 3 ID : 264330683035  
Option 4 ID : 264330683037  
Status : Answered  
Chosen Option : 4

Q.8 Who propounded the philosophy of 'One Caste, One Religion, One God for all men'?

- Ans  1. Shree Narayana Guru  
 2. Savitribai Phule  
 3. Mahatma Gandhi  
 4. Raja Ram Mohan Roy

Question ID : 264330114882  
Option 1 ID : 264330451614  
Option 2 ID : 264330451615  
Option 3 ID : 264330451613  
Option 4 ID : 264330451616  
Status : Not Answered  
Chosen Option : --

Q.9 What type of earthquake occurs when induced stresses around mine workings cause massive rocks to fly explosively from the mine face, creating seismic waves?

- Ans  1. Collapse earthquake  
 2. Explosion earthquake  
 3. Volcanic earthquake  
 4. Tectonic earthquake

Question ID : 264330141510  
Option 1 ID : 264330554377  
Option 2 ID : 264330554376  
Option 3 ID : 264330554378  
Option 4 ID : 264330554375  
Status : Answered  
Chosen Option : 2

Q.10 The term 'monsoon' denotes the seasonal change in wind direction that occurs during which specific time period?

- Ans  1. Two decades  
 2. Two months  
 3. One day  
 4. Year

Question ID : 264330174344  
Option 1 ID : 264330683798  
Option 2 ID : 264330683797  
Option 3 ID : 264330683795  
Option 4 ID : 264330683796  
Status : Answered  
Chosen Option : 2

Q.11 Sunlight is the main source of \_\_\_\_\_.

- Ans  1. Vitamin A  
 2. Vitamin B  
 3. Vitamin D  
 4. Vitamin C

Question ID : 264330120064  
Option 1 ID : 264330470511  
Option 2 ID : 264330470514  
Option 3 ID : 264330470512  
Option 4 ID : 264330470513  
Status : Answered  
Chosen Option : 3

Q.12 In which of the following dance genres is Mallika Sarabhai an accomplished dancer?

- Ans
- 1. Kathakali and Odissi
  - 2. Odissi and Kuchipudi
  - 3. Bharatnatyam and Odissi
  - 4. Kuchipudi and Bharatnatyam

Question ID : 264330113797  
Option 1 ID : 264330447276  
Option 2 ID : 264330447273  
Option 3 ID : 264330447274  
Option 4 ID : 264330447275  
Status : Answered  
Chosen Option : 3

Q.13 In which of the following Indian states is Ghum Monastery located?

- Ans
- 1. Karnataka
  - 2. Himachal Pradesh
  - 3. West Bengal
  - 4. Arunachal Pradesh

Question ID : 264330109635  
Option 1 ID : 264330430817  
Option 2 ID : 264330430819  
Option 3 ID : 264330430818  
Option 4 ID : 264330430820  
Status : Not Answered  
Chosen Option : --

Q.14 In which language was the largest newspaper published in India in the year 2021-22?

- Ans
- 1. Hindi
  - 2. English
  - 3. Urdu
  - 4. Bengali

Question ID : 264330181434  
Option 1 ID : 264330711660  
Option 2 ID : 264330711659  
Option 3 ID : 264330711661  
Option 4 ID : 264330711662  
Status : Not Answered  
Chosen Option : --

Q.15 Which of the following statements is correct about privatisation?

Statements:

- I. It promotes economic efficiency
- II. It delimits the interference of bureaucracy
- III. It leads to market failure

Ans  1. Only statements I and II

2. Only statement II

3. Only statement III

4. Only statement I

Question ID : 26433066581

Option 1 ID : 264330260850

Option 2 ID : 264330260849

Option 3 ID : 264330260851

Option 4 ID : 264330260848

Status : Answered

Chosen Option : 4

Q.16 'नागे वाज़ा' जूडो में इस्तेमाल की जाने वाली एक \_\_\_\_\_ की तकनीक है।

Ans  1. दम घुटाने (चोकिंग)

2. जकड़ने (ग्रीपिंग)

3. दूर हटाने (थ्रोइंग)

4. पकड़े रखने (होल्डिंग)

Question ID : 264330118481

Option 1 ID : 264330465328

Option 2 ID : 264330465325

Option 3 ID : 264330465326

Option 4 ID : 264330465327

Status : Not Answered

Chosen Option : --

Q.17 In which budget was the policy of LERMS announced?

Ans  1. 1991-92

2. 1992-93

3. 1995-96

4. 1990-91

Question ID : 264330109418

Option 1 ID : 264330429950

Option 2 ID : 264330429951

Option 3 ID : 264330429952

Option 4 ID : 264330429949

Status : Not Answered

Chosen Option : --

Q.18 In the context of globalisation, what does PPP stand for?

- Ans
- 1. Purchase Power Parity
  - 2. Purchasing Par Parity
  - 3. Purchasing Power Parity
  - 4. Purchasing Par Parities

Question ID : 264330109581  
Option 1 ID : 264330430602  
Option 2 ID : 264330430603  
Option 3 ID : 264330430601  
Option 4 ID : 264330430604  
Status : Answered  
Chosen Option : 3

Q.19 \_\_\_\_\_ is the final interpreter of the Constitution of India.

- Ans
- 1. Attorney General
  - 2. Comptroller and Auditor General
  - 3. Supreme Court
  - 4. President of India

Question ID : 264330134562  
Option 1 ID : 264330527204  
Option 2 ID : 264330527203  
Option 3 ID : 264330527205  
Option 4 ID : 264330527206  
Status : Answered  
Chosen Option : 1

Q.20 Ram Sahay Pandey, a Padma Shri 2022 awardee, is associated with which of the following dance forms of the Bedia community of Madhya Pradesh?

- Ans
- 1. Karma
  - 2. Ravala
  - 3. Rai
  - 4. Badhai

Question ID : 26433071519  
Option 1 ID : 264330280503  
Option 2 ID : 264330280502  
Option 3 ID : 264330280501  
Option 4 ID : 264330280500  
Status : Not Answered  
Chosen Option : --

Q.21 Which of the following measures of credit control requires a well-developed money market?

- Ans
- 1. Open market operations
  - 2. Bank rate policy
  - 3. Variable reserve ratio
  - 4. Qualitative measures

Question ID : 264330112465  
Option 1 ID : 264330441945  
Option 2 ID : 264330441946  
Option 3 ID : 264330441947  
Option 4 ID : 264330441948  
Status : Not Answered  
Chosen Option : --

Q.22 Which of the following festivals is celebrated in honour of Hidimba Devi in Himachal Pradesh?

- Ans
- 1. Shorai Festival
  - 2. Maghi Festival
  - 3. Bisua Festival
  - 4. Doongri Festival

Question ID : 264330141782  
Option 1 ID : 264330555450  
Option 2 ID : 264330555449  
Option 3 ID : 264330555448  
Option 4 ID : 264330555447  
Status : Answered  
Chosen Option : 2

Q.23 Vijayadashami is also known as \_\_\_\_\_.

- Ans
- 1. Dussehra
  - 2. Holi
  - 3. Diwali
  - 4. Ganesh Chaturthi

Question ID : 264330109311  
Option 1 ID : 264330429523  
Option 2 ID : 264330429521  
Option 3 ID : 264330429522  
Option 4 ID : 264330429524  
Status : Answered  
Chosen Option : 1

Q.24 Who among the following social reformers established Satyashodhak Samaj?

- Ans
- 1. Jyotiba Phule
  - 2. Narayana Guru
  - 3. Ramaswami Naicker-Periyar
  - 4. Dr. Babasaheb Ambedkar

Question ID : 264330113595  
Option 1 ID : 264330446465  
Option 2 ID : 264330446467  
Option 3 ID : 264330446468  
Option 4 ID : 264330446466  
Status : Answered  
Chosen Option : 1

Q.25 Mein Kampf' has been written by which of the following politicians?

- Ans
- 1. Benito Mussolini
  - 2. Hirohito
  - 3. Adolf Hitler
  - 4. Clement Attlee

Question ID : 26433071507  
Option 1 ID : 264330280452  
Option 2 ID : 264330280454  
Option 3 ID : 264330280453  
Option 4 ID : 264330280455  
Status : Not Answered  
Chosen Option : --

Q.26 Pandit Ayodhya Prasad is associated with \_\_\_\_\_ .

Ans  1. pakhawaj

2. veena

3. flute

4. guitar

Question ID : 264330111936

Option 1 ID : 264330439830

Option 2 ID : 264330439829

Option 3 ID : 264330439831

Option 4 ID : 264330439832

Status : Not Answered

Chosen Option : --

Q.27 High Courts have the power to issue writs under which Article of the Constitution of India?

Ans  1. Article 222

2. Article 223

3. Article 226

4. Article 225

Question ID : 264330110578

Option 1 ID : 264330434592

Option 2 ID : 264330434590

Option 3 ID : 264330434591

Option 4 ID : 264330434589

Status : Answered

Chosen Option : 3

Q.28 Ashvaghosha, the author of Buddhacharita, was the philosopher in the court of which Kushana kings?

Ans  1. Kanishka I

2. Vasudeva I

3. Huvishka

4. Vima Kadphises

Question ID : 264330120419

Option 1 ID : 264330471927

Option 2 ID : 264330471930

Option 3 ID : 264330471929

Option 4 ID : 264330471928

Status : Answered

Chosen Option : 1

**Q.29** Match List I (name of the periodic element) with List II (symbols of the periodic element) and select the correct code.

List I				List II
A. Magnesium				i. Mn
B. Boron				ii. B
C. Manganese				iii. Ba
D. Barium				iv. Mg

Code:	A	B	C	D
I	iv	iii	i	ii
II	i	ii	iv	iii
III	iv	i	ii	iii
IV	iv	ii	i	iii

- Ans
- 1. III
  - 2. I
  - 3. II
  - 4. IV

Question ID : 264330173658  
Option 1 ID : 264330681113  
Option 2 ID : 264330681111  
Option 3 ID : 264330681112  
Option 4 ID : 264330681114  
Status : Answered  
Chosen Option : 4

**Q.30** Name the Freedom fighter who formed a clan of non-violent revolutionaries called Khudai Khidmatgars in 1929.

- Ans
- 1. KM Ashraf
  - 2. Khan Abdul Ghaffar Khan
  - 3. Abbas Tayabji
  - 4. Mohammed Yasin Khan

Question ID : 264330171708  
Option 1 ID : 264330673437  
Option 2 ID : 264330673438  
Option 3 ID : 264330673435  
Option 4 ID : 264330673436  
Status : Answered  
Chosen Option : 2

**Q.31** The National Sports Festival for Women was started in \_\_\_\_.

- Ans
- 1. 1974
  - 2. 1975
  - 3. 1976
  - 4. 1970

Question ID : 264330110368  
Option 1 ID : 264330433750  
Option 2 ID : 264330433751  
Option 3 ID : 264330433752  
Option 4 ID : 264330433749  
Status : Not Answered  
Chosen Option : --

**Q.32** Which of the following states topped the medal tally in the Khelo India Youth Games 2023?

- Ans**  1. Maharashtra  
 2. Haryana  
 3. Uttar Pradesh  
 4. Punjab

Question ID : 264330176920  
Option 1 ID : 264330693875  
Option 2 ID : 264330693876  
Option 3 ID : 264330693878  
Option 4 ID : 264330693877  
Status : Answered  
Chosen Option : 1

**Q.33** National Food Security Mission was launched in India in the year 2007-08 to increase the production of rice, wheat and \_\_\_\_\_.

- Ans**  1. saffron  
 2. millet  
 3. pulses  
 4. fruits

Question ID : 264330183060  
Option 1 ID : 264330717975  
Option 2 ID : 264330717974  
Option 3 ID : 264330717972  
Option 4 ID : 264330717973  
Status : Answered  
Chosen Option : 2

**Q.34** The autobiography 'Long Walk to Freedom' is written by:

- Ans**  1. Nelson Mandela  
 2. BR Ambedkar  
 3. Rabindranath Tagore  
 4. MK Gandhi

Question ID : 26433072941  
Option 1 ID : 264330285958  
Option 2 ID : 264330285956  
Option 3 ID : 264330285959  
Option 4 ID : 264330285957  
Status : Answered  
Chosen Option : 1

**Q.35** Which of the following options had figured in the royal emblem of the Chola dynasty?

- Ans**  1. Tiger  
 2. Elephant  
 3. Fish  
 4. Horse

Question ID : 264330118981  
Option 1 ID : 264330466580  
Option 2 ID : 264330466581  
Option 3 ID : 264330466579  
Option 4 ID : 264330466582  
Status : Answered  
Chosen Option : 3

Q.36 Which Indian state has got the highest literacy rate as per National Survey of India 2022?

- Ans
- 1. Goa
  - 2. Maharashtra
  - 3. Kerala
  - 4. Karnataka

Question ID : 264330177909  
Option 1 ID : 264330697724  
Option 2 ID : 264330697725  
Option 3 ID : 264330697723  
Option 4 ID : 264330697726  
Status : Answered  
Chosen Option : 3

Q.37 According to Sangam texts, the term uzhavar means:

- Ans
- 1. slaves
  - 2. large landowners
  - 3. teachers
  - 4. ordinary ploughmen

Question ID : 264330119473  
Option 1 ID : 264330468177  
Option 2 ID : 264330468178  
Option 3 ID : 264330468175  
Option 4 ID : 264330468176  
Status : Not Answered  
Chosen Option : --

Q.38 The famous festival known as 'Paro Tschechu' is associated with which country?

- Ans
- 1. Japan
  - 2. Burma
  - 3. Bhutan
  - 4. Thailand

Question ID : 264330182980  
Option 1 ID : 264330717652  
Option 2 ID : 264330717653  
Option 3 ID : 264330717654  
Option 4 ID : 264330717655  
Status : Not Answered  
Chosen Option : --

Q.39 Which Article of the Constitution of India empowers a High Court to issue writs?

- Ans
- 1. Article 230
  - 2. Article 220
  - 3. Article 223
  - 4. Article 226

Question ID : 264330177763  
Option 1 ID : 264330697162  
Option 2 ID : 264330697159  
Option 3 ID : 264330697160  
Option 4 ID : 264330697161  
Status : Answered  
Chosen Option : 4

**Q.40** Under which Constitutional Amendment Act, was the term "Secular" added in the Preamble?

- Ans
- 1. 43rd Constitutional Amendment Act
  - 2. 44th Constitutional Amendment Act
  - 3. 41st Constitutional Amendment Act
  - 4. 42nd Constitutional Amendment Act

Question ID : 264330114481  
Option 1 ID : 264330450011  
Option 2 ID : 264330450012  
Option 3 ID : 264330450009  
Option 4 ID : 264330450010  
Status : Answered  
Chosen Option : 4

**Q.41** Khandesh was incorporated into the Mughal empire in which of the following years?

- Ans
- 1. 1601
  - 2. 1603
  - 3. 1598
  - 4. 1600

Question ID : 264330171693  
Option 1 ID : 264330673377  
Option 2 ID : 264330673378  
Option 3 ID : 264330673375  
Option 4 ID : 264330673376  
Status : Answered  
Chosen Option : 2

**Q.42** Which place in the north-eastern part of the northern Indian state of Himachal Pradesh is popularly known as the Cold Desert Mountains?

- Ans
- 1. Sangti Valley
  - 2. Parvati Valley
  - 3. Aalo Valley
  - 4. Spiti Valley

Question ID : 264330131014  
Option 1 ID : 264330513168  
Option 2 ID : 264330513169  
Option 3 ID : 264330513167  
Option 4 ID : 264330513170  
Status : Not Answered  
Chosen Option : --

**Q.43** Select the personality who received the Sangeet Natak Akademi 2021 award for his/her contribution in Mohiniyattam.

- Ans
- 1. Thokchom Ibemubi Devi
  - 2. Bhuvan Kumar
  - 3. Neena Prasad
  - 4. Bijay Kumar Jena

Question ID : 264330130528  
Option 1 ID : 264330511225  
Option 2 ID : 264330511223  
Option 3 ID : 264330511224  
Option 4 ID : 264330511226  
Status : Answered  
Chosen Option : 3

Q.44 From which of the following countries did India adopt the 'amendment procedure in the constitution'?

- Ans  1. South Africa  
 2. Ireland  
 3. The US  
 4. France

Question ID : 264330133044  
Option 1 ID : 264330521230  
Option 2 ID : 264330521227  
Option 3 ID : 264330521228  
Option 4 ID : 264330521229  
Status : Answered  
Chosen Option : 1

Q.45 The Dronacharya award is given to \_\_\_\_\_.

- Ans  1. best coach  
 2. best player  
 3. best teacher  
 4. best soldier

Question ID : 264330110389  
Option 1 ID : 264330433834  
Option 2 ID : 264330433833  
Option 3 ID : 264330433835  
Option 4 ID : 264330433836  
Status : Answered  
Chosen Option : 1

Q.46 Pandit Hariprasad Chaurasia is a world-renowned exponent of the \_\_\_\_\_.

- Ans  1. Sarod  
 2. Sitar  
 3. Bansuri  
 4. tabla

Question ID : 264330116420  
Option 1 ID : 264330457767  
Option 2 ID : 264330457768  
Option 3 ID : 264330457765  
Option 4 ID : 264330457766  
Status : Answered  
Chosen Option : 4

Q.47 In the Lok Sabha, \_\_\_\_\_ seats are reserved for the members from Scheduled Castes.

- Ans  1. 80  
 2. 82  
 3. 73  
 4. 84

Question ID : 264330139438  
Option 1 ID : 264330546185  
Option 2 ID : 264330546184  
Option 3 ID : 264330546183  
Option 4 ID : 264330546186  
Status : Not Answered  
Chosen Option : --

**Q.48** Below are some statements about the Ozone layer.

**Statement 1.** It is found in the stratosphere.

**Statement 2.** Chlorofluorocarbons (CFCs) are responsible for Ozone hole.

**Statement 3.** Ozone layer is found around 15–30 km above the earth's surface.

**Statement 4.** Ozone layer is expected not to recover anymore now.

Which of these statements are correct?

- Ans**
- 1. Only statements 2, 3 and 4
  - 2. Only statements 3 and 4
  - 3. Only statements 1, 2 and 3
  - 4. Only statements 1 and 2

Question ID : 264330131802  
Option 1 ID : 264330516310  
Option 2 ID : 264330516309  
Option 3 ID : 264330516307  
Option 4 ID : 264330516308  
Status : Answered  
Chosen Option : 3

**Q.49** The Sun Temple of Konark is located on the shore of the \_\_\_\_\_.

- Ans**
- 1. Bay of Bengal
  - 2. Indian Ocean
  - 3. Red Sea
  - 4. Arabian Sea

Question ID : 264330109649  
Option 1 ID : 264330430874  
Option 2 ID : 264330430873  
Option 3 ID : 264330430876  
Option 4 ID : 264330430875  
Status : Answered  
Chosen Option : 1

**Q.50** Hojagiri is a famous dance form of which of these states?

- Ans**
- 1. Punjab
  - 2. Jharkhand
  - 3. Assam
  - 4. Tripura

Question ID : 264330109286  
Option 1 ID : 264330429421  
Option 2 ID : 264330429424  
Option 3 ID : 264330429422  
Option 4 ID : 264330429423  
Status : Not Answered  
Chosen Option : --

Q.1 Two statements are given followed by two conclusions numbered I and II. Assuming the statements to be true, even if they seem to be at variance from commonly known facts, decide which of the conclusions logically follow(s) from the statements.

Statements:

All Shirts are Cottons.

Some Shirts are Nets.

Conclusions:

I. All Nets are Shirts.

II. Some Nets are Cottons.

- Ans  1. Both conclusions I and II follow.
2. Only conclusion II follows.
3. Neither conclusion I nor II follows.
4. Only conclusion I follows.

Question ID : 26433076595

Option 1 ID : 264330300446

Option 2 ID : 264330300445

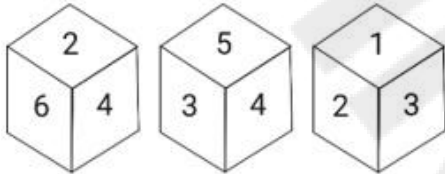
Option 3 ID : 264330300447

Option 4 ID : 264330300444

Status : Answered

Chosen Option : 2

Q.2 Three different positions of the same dice are shown. Find the number on the face opposite to the face showing '3'.



- Ans  1. 2
2. 5
3. 1
4. 6

Question ID : 264330112035

Option 1 ID : 264330440225

Option 2 ID : 264330440228

Option 3 ID : 264330440226

Option 4 ID : 264330440227

Status : Answered

Chosen Option : 4

Q.3 Which of the following letter clusters will replace the question mark (?) in the given series to make it logically complete?  
JGI, HJG, FME, DPC, ?

- Ans  1. BSA
2. BSB
3. BRB
4. ASA

Question ID : 264330102226

Option 1 ID : 264330401371

Option 2 ID : 264330401370

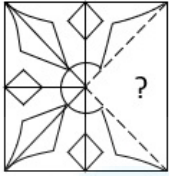
Option 3 ID : 264330401369

Option 4 ID : 264330401372

Status : Answered

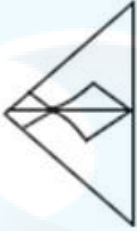
Chosen Option : 1

Q.4 Select the option figure that will replace the question mark (?) in the figure given below to complete the pattern.



Ans

✗ 1.



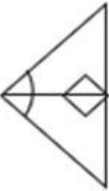
✓ 2.



✗ 3.



✗ 4.



Question ID : 26433080836

Option 1 ID : 264330317280

Option 2 ID : 264330317279

Option 3 ID : 264330317277

Option 4 ID : 264330317278

Status : Answered

Chosen Option : 2

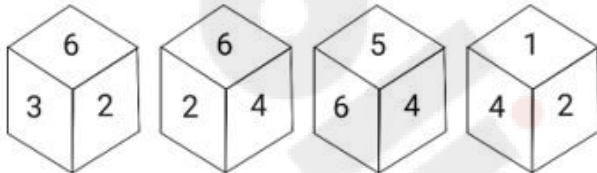
Q.5 Select the number from among the given options that can replace the question mark (?) in the following series.

1, 2, 5, 26, 677, ?

- Ans
- 1. 3255
  - 2. 45245
  - 3. 24563
  - 4. 458330

Question ID : 264330109759  
Option 1 ID : 264330431316  
Option 2 ID : 264330431313  
Option 3 ID : 264330431315  
Option 4 ID : 264330431314  
Status : Answered  
Chosen Option : 4

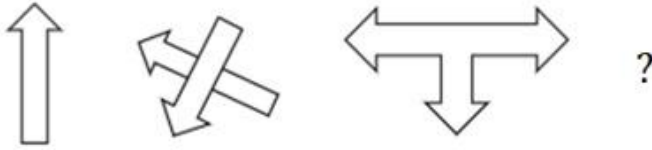
Q.6 Four different positions of the same dice are shown below. Which number is on the face opposite to the face showing '6'?



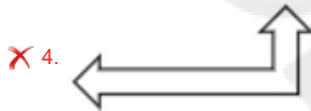
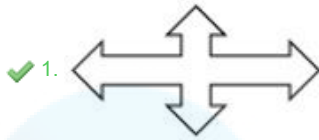
- Ans
- 1. 1
  - 2. 3
  - 3. 2
  - 4. 4

Question ID : 264330112039  
Option 1 ID : 264330440241  
Option 2 ID : 264330440243  
Option 3 ID : 264330440242  
Option 4 ID : 264330440244  
Status : Answered  
Chosen Option : 1

Q.7 Select the figure that will replace the question mark (?) in the following figure series.



Ans



Question ID : 264330112033

Option 1 ID : 264330440218

Option 2 ID : 264330440217

Option 3 ID : 264330440220

Option 4 ID : 264330440219

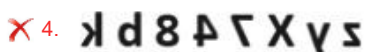
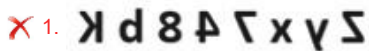
Status : Answered

Chosen Option : 1

Q.8 Select the correct mirror image of the given figure when the mirror is placed at MN as shown below.



Ans



Question ID : 264330117300

Option 1 ID : 264330461257

Option 2 ID : 264330461260

Option 3 ID : 264330461259

Option 4 ID : 264330461258

Status : Answered

Chosen Option : 3

Q.9 How many triangles are there in the given figure?



Ans ✓ 1.6

✗ 2.5

✗ 3.7

✗ 4.8

Question ID : 26433094985

Option 1 ID : 264330372762

Option 2 ID : 264330372761

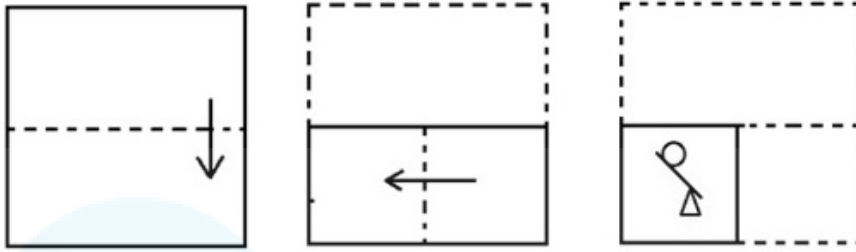
Option 3 ID : 264330372763

Option 4 ID : 264330372764

Status : Answered

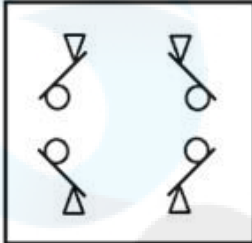
Chosen Option : 1

Q.10 The sequence of folding a piece of paper and the manner in which the folded paper has been cut is shown below. Choose a figure which would most closely resemble the unfolded form of the paper.

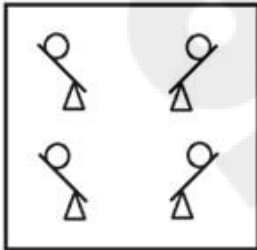


Ans

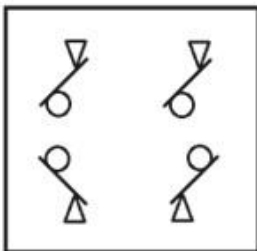
✓ 1.



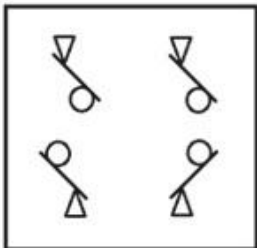
✗ 2.



✗ 3.



✗ 4.



Question ID : 264330112315

Option 1 ID : 264330441348

Option 2 ID : 264330441345

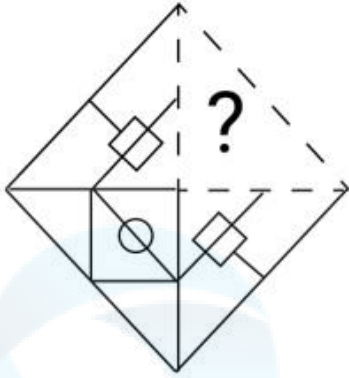
Option 3 ID : 264330441347

Option 4 ID : 264330441346

Status : Answered

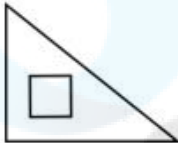
Chosen Option : 1

Q.11 Select the figure from the options that can replace the question mark (?) and complete the given pattern.

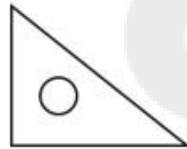


Ans

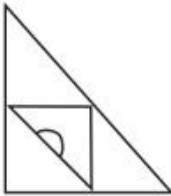
✗ 1.



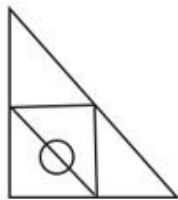
✗ 2.



✗ 3.



✓ 4.



Question ID : 264330106463

Option 1 ID : 264330418154

Option 2 ID : 264330418153

Option 3 ID : 264330418156

Option 4 ID : 264330418155

Status : Answered

Chosen Option : 4

Q.12 Six students are sitting around a circular table facing the centre. Red is sitting fourth to the right of White. Blue is sitting second to the right of Gray. Black is sitting third to the right of Pink. White is the immediate neighbour of Gray and Black.. Who is the immediate neighbour of Red and Pink?

Ans ✓ 1. Blue

✗ 2. Black

✗ 3. Gray

✗ 4. White

Question ID : 26433081654

Option 1 ID : 264330320449

Option 2 ID : 264330320452

Option 3 ID : 264330320450

Option 4 ID : 264330320451

Status : Answered

Chosen Option : 1

Q.13

Which figure from the given options would replace the question mark (?) if the following figure series were to be continued?

B	♥	┌	○	B	♥	○	♥	B	┌	○	♥	
○	V	8	V	8	┌	┌	V	8	V	8	B	
┌	=	X	┌	X	=	X	=	┌	X	┌	=	?

Ans

✗ 1.

○	┌	♥
X	V	8
┌	=	B

✗ 2.

V	┌	○
8	B	♥
X	=	┌

✗ 3.

┌	♥	○
8	B	=
V	X	┌

✓ 4.

┌	♥	○
X	V	8
┌	=	B

Question ID : 26433044934

Option 1 ID : 264330176171

Option 2 ID : 264330176173

Option 3 ID : 264330176174

Option 4 ID : 264330176172

Status : Answered

Chosen Option : 4

Q.14 Which figure should replace the question mark (?) if the series were to be continued?

A	U	9	9	A	U	S	9	A	A	S	9	
	S		=			□			U			?
	=		S			U			□			

Ans

✗ 1.

9	□	A
	S	
	U	

✓ 2.

□	A	S
	4	
	9	

✗ 3.

S	9	□
	4	
	A	

✗ 4.

□	A	S
	U	
	9	

Question ID : 264330130796

Option 1 ID : 264330512298

Option 2 ID : 264330512296

Option 3 ID : 264330512297

Option 4 ID : 264330512295

Status : Answered

Chosen Option : 4

Q.15 Select the word-pair that best represents a similar relationship to the one expressed in the pair of words given below.  
(The words must be considered as meaningful English words and must not be related to each other based on the number of letters/number of consonants/vowels in the word.)

Exit : Leave

- Ans
- ✗ 1. Fate : Fete
  - ✓ 2. Select : Choose
  - ✗ 3. Start : End
  - ✗ 4. Moat : Mote

Question ID : 26433053231

Option 1 ID : 264330208229

Option 2 ID : 264330208228

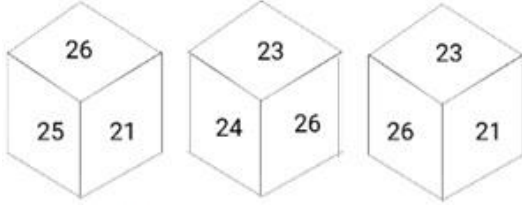
Option 3 ID : 264330208226

Option 4 ID : 264330208227

Status : Answered

Chosen Option : 2

Q.16 Six numbers, 21, 22, 23, 24, 25 and 26 are written on different faces of a dice. Three positions of this dice are shown here. Find the number on the face opposite 21.



Ans  1. 24

2. 22

3. 23

4. 25

Question ID : 264330106413

Option 1 ID : 264330417955

Option 2 ID : 264330417953

Option 3 ID : 264330417954

Option 4 ID : 264330417956

Status : Answered

Chosen Option : 1

Q.17 Select the option figure that will replace the question mark (?) in the figure given below to complete the pattern.



Ans

✗ 1.



✓ 2.



✗ 3.



✗ 4.



Question ID : 26433089462

Option 1 ID : 264330351351

Option 2 ID : 264330351350

Option 3 ID : 264330351352

Option 4 ID : 264330351349

Status : Answered

Chosen Option : 2

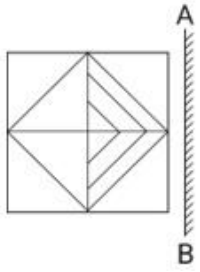
**Q.18** Select the set in which the numbers are related in the same way as are the numbers of the following sets.

(NOTE: Operations should be performed on the whole numbers, without breaking down the numbers into its constituent digits. E.g. 13 – Operations on 13 such as adding/deleting/multiplying etc. to 13 can be performed. Breaking down 13 into 1 and 3 and then performing mathematical operations on 1 and 3 is not allowed)  
 (4, 42, 5), (3, 45, 7)

- Ans  1. (6, 49, 3)  
 2. (6, 32, 2)  
 3. (7, 43, 4)  
 4. (7, 42, 5)

Question ID : 26433097192  
 Option 1 ID : 264330381467  
 Option 2 ID : 264330381465  
 Option 3 ID : 264330381466  
 Option 4 ID : 264330381468  
 Status : Answered  
 Chosen Option : 4

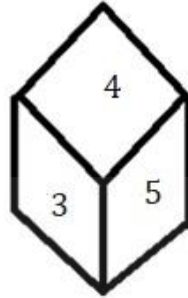
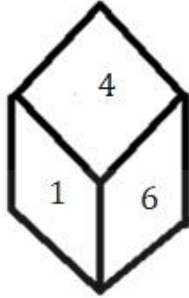
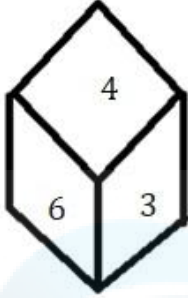
**Q.19** Select the correct mirror image of the given figure when the mirror is placed at 'AB' as shown.



- Ans  1.   
 2.   
 3.   
 4.

Question ID : 264330114260  
 Option 1 ID : 264330449126  
 Option 2 ID : 264330449125  
 Option 3 ID : 264330449128  
 Option 4 ID : 264330449127  
 Status : Answered  
 Chosen Option : 2

Q.20 Three different positions of the same dice are shown. Find the number on the face opposite the face having '2'.



- Ans
- 1. 1
  - 2. 4
  - 3. 3
  - 4. 6

Question ID : 264330113651  
 Option 1 ID : 264330446689  
 Option 2 ID : 264330446692  
 Option 3 ID : 264330446691  
 Option 4 ID : 264330446690  
 Status : Answered  
 Chosen Option : 2

Q.21 Select the option that is related to the third term in the same way as the second term is related to the first term and the sixth term is related to the fifth term.  
 $400 : 200 :: 248 : ? :: 256 : 128$

- Ans
- 1. 200
  - 2. 124
  - 3. 148
  - 4. 114

Question ID : 264330101043  
 Option 1 ID : 264330396720  
 Option 2 ID : 264330396717  
 Option 3 ID : 264330396719  
 Option 4 ID : 264330396718  
 Status : Answered  
 Chosen Option : 2

Q.22 Which two signs should be interchanged to make the following equation correct?

$$29 - 23 + 42 \times 21 \div 2 = 10$$

- Ans
- 1. - and +
  - 2. + and +
  - 3. - and ×
  - 4. ÷ and ×

Question ID : 264330101076  
 Option 1 ID : 264330396849  
 Option 2 ID : 264330396852  
 Option 3 ID : 264330396851  
 Option 4 ID : 264330396850  
 Status : Answered  
 Chosen Option : 4

Q.23 In a certain code language, 'BAE' is written as '512' and 'WIN' is written as '14923'.  
How will 'HER' be written in that language?

- Ans
- 1. 1826
  - 2. 1844
  - 3. 1838
  - 4. 1858

Question ID : 26433089414  
Option 1 ID : 264330351157  
Option 2 ID : 264330351159  
Option 3 ID : 264330351158  
Option 4 ID : 264330351160  
Status : Answered  
Chosen Option : 4

Q.24 Select the correct combination of mathematical signs that can sequentially replace the  
\* signs and balance the given equation.  
 $54*16*3*6*2*9$

- Ans
- 1. +, x, -, +, =
  - 2. +, -, x, +, =
  - 3. -, x, +, +, =
  - 4. +, -, x, +, =

Question ID : 26433079086  
Option 1 ID : 264330310348  
Option 2 ID : 264330310349  
Option 3 ID : 264330310350  
Option 4 ID : 264330310351  
Status : Answered  
Chosen Option : 3

Q.25 Which of the following option figures will complete the pattern in the figure given below?

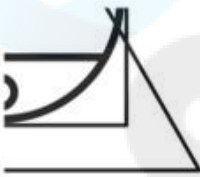


Ans

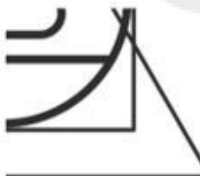
✗ 1.



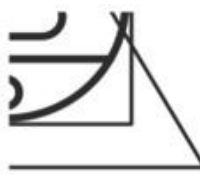
✗ 2.



✗ 3.



✓ 4.



Question ID : 26433089629

Option 1 ID : 264330352020

Option 2 ID : 264330352018

Option 3 ID : 264330352019

Option 4 ID : 264330352017

Status : Answered

Chosen Option : 4

Section : Numerical Ability

Q.1 If 4 men or 8 women can do a work in 12 days, then in how many days can 9 men and 6 women do the same work?

Ans ✗ 1. 5

✓ 2. 4

✗ 3. 3

✗ 4. 6

Question ID : 264330104328

Option 1 ID : 264330409615

Option 2 ID : 264330409614

Option 3 ID : 264330409613

Option 4 ID : 264330409616

Status : Answered

Chosen Option : 2

Q.2 The selling price of 32 items is equal to the cost price of 45 items. What is the percentage of profit made on the sale of each item?

- Ans
- 1. 40.75%
  - 2. 40.5%
  - 3. 40.725%
  - 4. 40.625%

Question ID : 264330183824  
Option 1 ID : 264330720972  
Option 2 ID : 264330720973  
Option 3 ID : 264330720974  
Option 4 ID : 264330720975  
Status : Answered  
Chosen Option : 4

Q.3 A person divides his property so that his wife's share to his daughter's and the daughter's share to his son's, are both in the ratio 1 : 4. If the wife gets ₹5,000 less than the son, the value (in ₹) of the whole property is:

- Ans
- 1. 7,000
  - 2. 5,000
  - 3. 6,000
  - 4. 8,000

Question ID : 264330129427  
Option 1 ID : 264330507076  
Option 2 ID : 264330507074  
Option 3 ID : 264330507075  
Option 4 ID : 264330507077  
Status : Answered  
Chosen Option : 1

Q.4 The LCM of two numbers is 12 times their HCF. One of the numbers is 8 and the sum of the HCF and LCM is 52. What is the other number?

- Ans
- 1. 22
  - 2. 24
  - 3. 26
  - 4. 28

Question ID : 264330104149  
Option 1 ID : 264330408897  
Option 2 ID : 264330408898  
Option 3 ID : 264330408899  
Option 4 ID : 264330408900  
Status : Answered  
Chosen Option : 2

Q.5 In an equilateral triangle, each side is 'a' units. The altitude of this triangle is:

Ans

✓ 1.  $\frac{a\sqrt{3}}{2}$

✗ 2.  $\frac{4a}{3}$

✗ 3.  $\frac{\sqrt{3}a}{\sqrt{2}}$

✗ 4.  $\frac{3a^2}{4}$

Question ID : 264330104367

Option 1 ID : 264330409769

Option 2 ID : 264330409770

Option 3 ID : 264330409771

Option 4 ID : 264330409772

Status : Answered

Chosen Option : 1

Q.6 The inradius of a triangle is 7 cm and its area is 343 cm<sup>2</sup>. The perimeter of the triangle is

Ans ✓ 1. 98 cm

✗ 2. 68 cm

✗ 3. 88 cm

✗ 4. 49 cm

Question ID : 264330119359

Option 1 ID : 264330467723

Option 2 ID : 264330467725

Option 3 ID : 264330467724

Option 4 ID : 264330467726

Status : Not Answered

Chosen Option : --

Q.7 A sum of ₹2,52,500 at the rate of 4.5% per annum for a period of 2.5 years will amount to how much (in ₹) if the money is invested at simple interest?

Ans ✗ 1. 2,75,906.50

✗ 2. 2,78,906.25

✗ 3. 2,82,906.25

✓ 4. 2,80,906.25

Question ID : 264330119932

Option 1 ID : 264330470005

Option 2 ID : 264330470004

Option 3 ID : 264330470003

Option 4 ID : 264330470006

Status : Answered

Chosen Option : 4

Q.8 In how many seconds will a 210 m long train, travelling at a speed of 97 km/h, come from behind and completely cross a 240 m long train travelling at 79 km/h in the same direction as that of the first train?

- Ans
- 1. 96
  - 2. 100
  - 3. 90
  - 4. 84

Question ID : 264330122848  
Option 1 ID : 264330481461  
Option 2 ID : 264330481462  
Option 3 ID : 264330481460  
Option 4 ID : 264330481459  
Status : Answered  
Chosen Option : 3

Q.9 The marked price of a book is ₹700 but the retailer gets a discount of 20%. If the retailer sells the book at marked price, then the profit percentage is:

- Ans
- 1. 20%
  - 2. 30%
  - 3. 25%
  - 4. 22%

Question ID : 264330130931  
Option 1 ID : 264330512835  
Option 2 ID : 264330512837  
Option 3 ID : 264330512836  
Option 4 ID : 264330512838  
Status : Answered  
Chosen Option : 3

Q.10 A person loses 18% of his money and after spending 87% of the remainder, he is left with ₹122. How much did he originally have? (Approximate value)

- Ans
- 1. ₹1,200
  - 2. ₹1,143.8
  - 3. ₹1,300
  - 4. ₹1,144.5

Question ID : 264330131828  
Option 1 ID : 264330516411  
Option 2 ID : 264330516414  
Option 3 ID : 264330516413  
Option 4 ID : 264330516412  
Status : Answered  
Chosen Option : 4

Q.11 The compound interest on a sum of ₹8,000 becomes ₹1,261 in 18 months. Find the rate of interest if interest is compounded half-yearly.

- Ans
- 1. 12%
  - 2. 20%
  - 3. 10%
  - 4. 8%

Question ID : 264330109256  
Option 1 ID : 264330429302  
Option 2 ID : 264330429304  
Option 3 ID : 264330429301  
Option 4 ID : 264330429303  
Status : Answered  
Chosen Option : 3

Q.12 Two wires, 18 m and 24 m long, are to be cut into pieces of equal length. Find the maximum length of each piece (in m).

- Ans
- 1. 12
  - 2. 18
  - 3. 8
  - 4. 6

Question ID : 264330118033  
Option 1 ID : 264330463947  
Option 2 ID : 264330463950  
Option 3 ID : 264330463948  
Option 4 ID : 264330463949  
Status : Answered  
Chosen Option : 4

Q.13 The average of 5 consecutive odd numbers is 63. Which of the following is the largest number among them?

- Ans
- 1. 65
  - 2. 69
  - 3. 67
  - 4. 71

Question ID : 264330129988  
Option 1 ID : 264330509183  
Option 2 ID : 264330509185  
Option 3 ID : 264330509184  
Option 4 ID : 264330509186  
Status : Answered  
Chosen Option : 3

Q.14 Find the greatest number that divides 90, 180 and 240 exactly.

- Ans
- 1. 20
  - 2. 60
  - 3. 15
  - 4. 30

Question ID : 264330109227  
Option 1 ID : 264330429186  
Option 2 ID : 264330429188  
Option 3 ID : 264330429187  
Option 4 ID : 264330429185  
Status : Answered  
Chosen Option : 4

**Q.15** The base of a right-angle triangle is increased by 60%. How much its height should be decreased to retain the same area?

- Ans
- 1. 30%
  - 2. 45.2%
  - 3. 60%
  - 4. 37.5%

Question ID : 264330142526  
Option 1 ID : 264330558383  
Option 2 ID : 264330558385  
Option 3 ID : 264330558386  
Option 4 ID : 264330558384  
Status : Answered  
Chosen Option : 4

Section : Computer Proficiency

**Q.1** In MS Excel 365, Which of the following is NOT a type of chart in MS Excel?

- Ans
- 1. Line chart
  - 2. Bar chart
  - 3. Pie chart
  - 4. Space chart

Question ID : 264330178560  
Option 1 ID : 264330700267  
Option 2 ID : 264330700268  
Option 3 ID : 264330700269  
Option 4 ID : 264330700270  
Status : Answered  
Chosen Option : 4

**Q.2** Which of the following is used in MS Word 365 to change the case in a reverse way?

- Ans
- 1. Reverse case
  - 2. Change case
  - 3. Toggle case
  - 4. Alter case

Question ID : 264330176709  
Option 1 ID : 264330693051  
Option 2 ID : 264330693052  
Option 3 ID : 264330693054  
Option 4 ID : 264330693053  
Status : Answered  
Chosen Option : 1

**Q.3** In Microsoft Excel 365, which option should be selected if you want to save a workbook as a macro-enabled workbook with a different file name and location?

- Ans**
- 1. Save As
  - 2. Save a Copy
  - 3. Save Excel
  - 4. Save Workspace

Question ID : 264330178084  
Option 1 ID : 264330698399  
Option 2 ID : 264330698400  
Option 3 ID : 264330698401  
Option 4 ID : 264330698402  
Status : Answered  
Chosen Option : 1

**Q.4** What icon is used for attaching a file or document to an email message?

- Ans**
- 1. Pen icon
  - 2. Smiley icon
  - 3. Paper clip icon
  - 4. Trash can icon

Question ID : 264330182093  
Option 1 ID : 264330714214  
Option 2 ID : 264330714211  
Option 3 ID : 264330714213  
Option 4 ID : 264330714212  
Status : Answered  
Chosen Option : 3

**Q.5** What is the main purpose of a search engine?

- Ans**
- 1. Editing news articles
  - 2. Playing online games
  - 3. Sending emails
  - 4. Finding information on the internet

Question ID : 264330180666  
Option 1 ID : 264330708633  
Option 2 ID : 264330708631  
Option 3 ID : 264330708632  
Option 4 ID : 264330708634  
Status : Answered  
Chosen Option : 4

**Q.6** Which icon is commonly used to undo the last action performed in MS Word 365?

- Ans**
- 1. A pair of scissors
  - 2. A curved arrow pointing to the left
  - 3. A trash can
  - 4. A pencil

Question ID : 264330180862  
Option 1 ID : 264330709411  
Option 2 ID : 264330709412  
Option 3 ID : 264330709414  
Option 4 ID : 264330709413  
Status : Answered  
Chosen Option : 2

**Q.7** In MS Excel 365, which of the following keyboard shortcut keys is used to insert a new row in MS-Excel 365?

- Ans**
- 1. Ctrl + Alt + n
  - 2. Ctrl + Alt + + (plus key)
  - 3. Ctrl + shift + n
  - 4. Ctrl + shift + + (plus key)

Question ID : 264330179439  
Option 1 ID : 264330703762  
Option 2 ID : 264330703761  
Option 3 ID : 264330703759  
Option 4 ID : 264330703760  
Status : Answered  
Chosen Option : 3

**Q.8** How do we move the cursor to the beginning of a Microsoft Word 365 document?

- Ans**
- 1. By pressing 'Ctrl + End'
  - 2. By pressing 'Ctrl + Home'
  - 3. By pressing 'Ctrl + PgUp'
  - 4. By pressing 'Ctrl + PgDn'

Question ID : 264330182073  
Option 1 ID : 264330714132  
Option 2 ID : 264330714131  
Option 3 ID : 264330714133  
Option 4 ID : 264330714134  
Status : Answered  
Chosen Option : 2

**Q.9** Which of the following groups within the Insert tab will help us create a table in Microsoft Word 365?

- Ans**
- 1. Tables
  - 2. Illustrations
  - 3. Pages
  - 4. Links

Question ID : 264330182066  
Option 1 ID : 264330714104  
Option 2 ID : 264330714105  
Option 3 ID : 264330714103  
Option 4 ID : 264330714106  
Status : Answered  
Chosen Option : 1

**Q.10** What are the icons below the menu bar in a word processing application called?

- Ans**
- 1. Toolbar icons
  - 2. Shortcut icons
  - 3. Format icons
  - 4. Tool icons

Question ID : 264330173599  
Option 1 ID : 264330680878  
Option 2 ID : 264330680877  
Option 3 ID : 264330680876  
Option 4 ID : 264330680875  
Status : Answered  
Chosen Option : 3