



रेल भर्ती बोर्ड / RAILWAY RECRUITMENT BOARDS
सी ई एन आर आर सी - ०१/२०१९ - CEN RRC - 01/2019



Roll Number	
Candidate Name	
Test Center Name	iON Digital Zone iDZ Gram Gangedi Near Mahaveer Tapobhumi
Test Date	22/08/2022
Test Time	5:00 PM - 6:30 PM
Subject	Level 1

*** Note**

Correct Answer will carry 1 mark per Question.
Incorrect Answer will carry 1/3 Negative mark per Question.

- Options shown in green color with a tick icon are correct.
- Chosen option on the right of the question indicates the option selected by the candidate.

Section : Level 1

Q.1

The value of $\frac{(4x^2 - 9y^2)^3 + (9y^2 - 49z^2)^3 + (49z^2 - 4x^2)^3}{(2x - 3y)^3 + (3y - 7z)^3 + (7z - 2x)^3}$ is:

- Ans
- ☒ 1. $42xyz (2x - 3y)(3y - 7z)(7z - 2x)$
 - ☒ 2. $(2x + 3y)(3y + 7z)(7z + 2x)$
 - ☒ 3. $42xyz (2x + 3y)(3y + 7z)(7z + 2x)$
 - ☒ 4. $(2x - 3y)(3y - 7z)(7z - 2x)$

Question ID : 7518976319

Option 1 ID : 75189725276

Option 2 ID : 75189725274

Option 3 ID : 75189725275

Option 4 ID : 75189725273

Status : Not Answered

Chosen Option : --

Q.2 What are the two signs to be interchanged for making the following equation correct?

$$[(44 + 36) - (4 \times 4)] \div (1 - 5) \times 2 = 8$$

Ans ☒ 1. \times, \div

☒ 2. $+, -$

☒ 3. $+, \div$

☒ 4. $+, \times$

Question ID : 7518975113

Option 1 ID : 75189720450

Option 2 ID : 75189720452

Option 3 ID : 75189720449

Option 4 ID : 75189720451

Status : Not Answered

Chosen Option : --

Q.3 A cosmetic product is available at 75% discount. If the shopkeeper charges ₹1,874, what is its marked price?

Ans ☒ 1. ₹7,496

☒ 2. ₹8,342

☒ 3. ₹6,145

☒ 4. ₹5,674

Question ID : 7518975637

Option 1 ID : 75189722546

Option 2 ID : 75189722545

Option 3 ID : 75189722547

Option 4 ID : 75189722548

Status : Answered

Chosen Option : 1

Q.4 What is the name of the consumer awareness programme started by the Department of Consumer Affairs in 2022?

Ans ☒ 1. Consumer Behaviour Week

☒ 2. Consumer Empowerment Week

☒ 3. Consumer Awareness Week

☒ 4. Consumer Rights Week

Question ID : 7518974037

Option 1 ID : 75189716147

Option 2 ID : 75189716145

Option 3 ID : 75189716146

Option 4 ID : 75189716148

Status : Not Answered

Chosen Option : --

Q.5 The sum of the digits in a two-digit number is 9. If the value of the number is 6 more than 5 times the digit in the ones' place, then the number is:

- Ans**
- ☒ 1. 45
 - ☒ 2. 18
 - ☒ 3. 27
 - ☒ 4. 36

Question ID : 7518976325

Option 1 ID : 75189725297

Option 2 ID : 75189725298

Option 3 ID : 75189725299

Option 4 ID : 75189725300

Status : Answered

Chosen Option : 4

Q.6 In this question, a group of numbers/symbols is coded using letters as per the table given below and the conditions which follow. The correct combination of codes following the conditions is your answer.

Number/Symbol	4	6	7	S	#	@	2
Codes	H	F	M	E	T	P	Z

Conditions:

- (i) If the first element is an even number and the last element is also an even number, the codes for these two (the first and the last elements) are to be interchanged.
- (ii) If the second element is an even number and the fifth element is a symbol, the codes for these two (the second and the fifth elements) are to be interchanged.
- (iii) If the fourth element is a symbol and the sixth element is also a symbol, both these elements (the fourth and the sixth elements) are to be coded as N.

Question: 4 6 S 7 4 # @ 2

- Ans**
- ☒ 1. Z H E M F T P H
 - ☒ 2. Z F E M H T P H
 - ☒ 3. H F E M H T P Z
 - ☒ 4. Z F E N H N P H

Question ID : 7518975252

Option 1 ID : 75189721007

Option 2 ID : 75189721005

Option 3 ID : 75189721006

Option 4 ID : 75189721008

Status : Answered

Chosen Option : 2

Q.7 A shopkeeper bought 12 dozen eggs at the rate of ₹5 per egg. 12 eggs broke in transit. He sold the remaining eggs at the rate of ₹6 per egg. Find his percentage of profit.

- Ans**
- ☒ 1. 15%
 - ☒ 2. 10%
 - ☒ 3. 5%
 - ☒ 4. 20%

Question ID : **7518975854**
Option 1 ID : **75189723416**
Option 2 ID : **75189723414**
Option 3 ID : **75189723413**
Option 4 ID : **75189723415**

Status : **Answered**

Chosen Option : **2**

Q.8 Who launched India's first 'One Health Consortium'?

- Ans**
- ☒ 1. Ministry of Home Affairs
 - ☒ 2. Ministry of Health and Family Welfare
 - ☒ 3. Ministry of Education
 - ☒ 4. Ministry of Science and Technology

Question ID : **7518974149**
Option 1 ID : **75189716595**
Option 2 ID : **75189716594**
Option 3 ID : **75189716596**
Option 4 ID : **75189716593**

Status : **Not Answered**

Chosen Option : **--**

Q.9 Chauri Chaura incident occurred in which year?

- Ans**
- ☒ 1. 1921
 - ☒ 2. 1922
 - ☒ 3. 1920
 - ☒ 4. 1919

Question ID : **7518974167**
Option 1 ID : **75189716665**
Option 2 ID : **75189716666**
Option 3 ID : **75189716667**
Option 4 ID : **75189716668**

Status : **Answered**

Chosen Option : **4**

Q.10 Which of the following interchanges of signs would make the given equation correct?

$$5 \times 4 \div 10 - 8 + 2 = 8$$

Ans ✓ 1. +, -

✗ 2. +, ×

✗ 3. +, ÷

✗ 4. ×, ÷

Question ID : **7518975112**

Option 1 ID : **75189720445**

Option 2 ID : **75189720447**

Option 3 ID : **75189720448**

Option 4 ID : **75189720446**

Status : **Answered**

Chosen Option : **1**

Q.11 Which of the following alphanumeric clusters will replace the question mark (?) in the series to make it logically complete?

ACE 9, BDF 12, GIK 27, HJL 30, ?, NPR 48, SUW 63

Ans ✗ 1. MNO 42

✓ 2. MOQ 45

✗ 3. NOP 42

✗ 4. OPQ 48

Question ID : **7518974781**

Option 1 ID : **75189719122**

Option 2 ID : **75189719121**

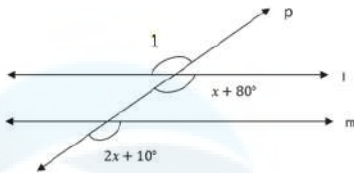
Option 3 ID : **75189719124**

Option 4 ID : **75189719123**

Status : **Answered**

Chosen Option : **2**

Q.12 In the given figure line l is parallel to m and p is the transversal. Find the measure of the angle 1.



- Ans
- ✓ 1. 150°
 - ✗ 2. 200°
 - ✗ 3. 140°
 - ✗ 4. 300°

Question ID : 7518975766

Option 1 ID : 75189723062

Option 2 ID : 75189723064

Option 3 ID : 75189723061

Option 4 ID : 75189723063

Status : Not Answered

Chosen Option : --

Q.13 Ramesh invested ₹1,232 at 5% p.a. rate of simple interest in a bank. What amount will he get after 3 years?

- Ans
- ✗ 1. ₹1,285.80
 - ✗ 2. ₹2,145.80
 - ✗ 3. ₹1,848.80
 - ✓ 4. ₹1,416.80

Question ID : 7518975616

Option 1 ID : 75189722462

Option 2 ID : 75189722463

Option 3 ID : 75189722461

Option 4 ID : 75189722464

Status : Answered

Chosen Option : 4

Q.14 Mr. Sharma, Mr. Gupta and Ms Sinha invested ₹4,000, ₹8,000 and ₹6,000, respectively, in a business. Mr. Sharma left after 6 months. If after 8 months, there was a gain of ₹34,000, then what will be the share of Mr. Gupta?

- Ans
- ✗ 1. ₹12,000
 - ✗ 2. ₹20,000
 - ✗ 3. ₹14,000
 - ✓ 4. ₹16,000

Question ID : 7518975603

Option 1 ID : 75189722409

Option 2 ID : 75189722412

Option 3 ID : 75189722410

Option 4 ID : 75189722411

Status : Answered

Chosen Option : 4

Q.15 If $3^{x-2} + 3^x = 7290$, then the value of x is:

- Ans
- ☒ 1. 8
 - ☐ 2. 9
 - ☐ 3. 6
 - ☐ 4. 7

Question ID : 7518976224

Option 1 ID : 75189724895

Option 2 ID : 75189724896

Option 3 ID : 75189724893

Option 4 ID : 75189724894

Status : Answered

Chosen Option : 1

Q.16 A concave mirror having focal length of magnitude 20 cm forms a real image at a distance of 60 cm from it. The object distance (in cm) is:

- Ans
- ☐ 1. +15
 - ☐ 2. +30
 - ☒ 3. -30
 - ☐ 4. -15

Question ID : 7518975383

Option 1 ID : 75189721532

Option 2 ID : 75189721530

Option 3 ID : 75189721529

Option 4 ID : 75189721531

Status : Not Answered

Chosen Option : --

Q.17 Consider the statements given below and identify the correct answer.

Statement-I: Washing soda is produced from sodium chloride.

Statement-II: It attacks dirt and grease to form water soluble products, which are then washed away on rinsing with water.

- Ans
- ☐ 1. Both the statements are false.
 - ☐ 2. Statement-I is true, and Statement-II is false.
 - ☐ 3. Statement-II is true, and Statement-I is false.
 - ☒ 4. Both the statements are true.

Question ID : 7518973668

Option 1 ID : 75189714670

Option 2 ID : 75189714671

Option 3 ID : 75189714672

Option 4 ID : 75189714669

Status : Answered

Chosen Option : 4

Q.18 Few birds (One each of Orange, Yellow, Black, Green, Grey, Red colour and three White coloured) were sitting in a row facing north. The black bird was an immediate neighbour of both, the red and the grey bird. The yellow bird was sitting to the immediate right of the green bird. Only three birds were sitting between the orange and the red bird and all these three birds were white. The yellow bird sat third to the right of the black bird. Which colour birds were sitting at the leftmost and rightmost ends of the row respectively?

- Ans**
- ✓ 1. Orange (Left) and Yellow (Right)
 - ✗ 2. Grey (Left) and Red (Right)
 - ✗ 3. White (Left) and Orange (Right)
 - ✗ 4. Yellow (Left) and White (Right)

Question ID : **7518974740**

Option 1 ID : **75189718959**

Option 2 ID : **75189718960**

Option 3 ID : **75189718958**

Option 4 ID : **75189718957**

Status : **Answered**

Chosen Option : **1**

Q.19 Kokborok is one of the state languages of Tripura. On 19th January 2022, Tripura celebrated which Kokborok day?

- Ans**
- ✗ 1. 34th
 - ✗ 2. 24th
 - ✗ 3. 55th
 - ✓ 4. 44th

Question ID : **7518973819**

Option 1 ID : **75189715274**

Option 2 ID : **75189715273**

Option 3 ID : **75189715276**

Option 4 ID : **75189715275**

Status : **Not Answered**

Chosen Option : **--**

Q.20 Three statements are given, followed by two conclusions numbered I and II. Assuming the statements to be true, even if they seem to be at variance with commonly known facts, decide which of the conclusions logically follow(s) from the statements.

Statements:

Some beds are tables.

Some tables are cupboards.

Some cupboards are chairs.

Conclusions:

I. Some chairs are beds.

II. Some beds are cupboards.

Ans ✓ 1. Neither conclusion I nor II follows

✗ 2. Only conclusion I follows

✗ 3. Only conclusion II follows

✗ 4. Both conclusions I and II follow

Question ID : 7518975173

Option 1 ID : 75189720692

Option 2 ID : 75189720689

Option 3 ID : 75189720690

Option 4 ID : 75189720691

Status : Answered

Chosen Option : 1

Q.21 Two pipes A and B can fill a cistern in 36 minutes and 48 minutes, respectively. Both the pipes are opened at the same time and pipe B is closed after some time. If the cistern gets filled in half an hour, then after how many minutes was pipe B closed?

Ans ✓ 1. 8

✗ 2. 5

✗ 3. 10

✗ 4. 9

Question ID : 7518976106

Option 1 ID : 75189724422

Option 2 ID : 75189724421

Option 3 ID : 75189724424

Option 4 ID : 75189724423

Status : Not Answered

Chosen Option : --

Q.22 In the reaction $\text{ZnO} + \text{C} \rightarrow \text{Zn} + \text{CO}$:

- Ans ☒ 1. ZnO is reduced to Zn
☐ 2. Zn does not undergo redox reaction.
☐ 3. ZnO is oxidized to Zn
☐ 4. carbon is reduced to CO

Question ID : 7518973613
Option 1 ID : 75189714450
Option 2 ID : 75189714452
Option 3 ID : 75189714451
Option 4 ID : 75189714449
Status : Not Answered
Chosen Option : --

Q.23 The monthly incomes of two friends Anuj and Mathew, are in the ratio 5 : 7 and each of them saves ₹10,000 every month. If the ratio of their expenditure is 2 : 3, find the income of Anuj.

- Ans ☐ 1. ₹5,000
☐ 2. ₹20,000
☒ 3. ₹50,000
☐ 4. ₹15,000

Question ID : 7518975600
Option 1 ID : 75189722400
Option 2 ID : 75189722398
Option 3 ID : 75189722399
Option 4 ID : 75189722397
Status : Answered
Chosen Option : 3

Q.24 The equation $x^2 - 6x + 9 = 0$ can be written as:

- Ans ☐ 1. $(x - 2)(x - 3) = 0$
☐ 2. $(x - 2)(x - 3)^2 = 0$
☐ 3. $(x + 3)^2 = 0$
☒ 4. $(x - 3)^2 = 0$

Question ID : 7518975948
Option 1 ID : 75189723790
Option 2 ID : 75189723791
Option 3 ID : 75189723789
Option 4 ID : 75189723792
Status : Answered
Chosen Option : 4

Q.25 The component of white light that deviates the most on passing through a glass prism is:

- Ans
- ☒ 1. blue
 - ☒ 2. red
 - ☒ 3. violet
 - ☒ 4. green

Question ID : **7518975434**
Option 1 ID : **75189721735**
Option 2 ID : **75189721733**
Option 3 ID : **75189721734**
Option 4 ID : **75189721736**
Status : **Not Answered**
Chosen Option : --

Q.26 What is the aim of Digital Government Mission launched by the Ministry of Electronics and Information Technology in January 2022?

- Ans
- ☒ 1. To provide employment information to youth living in rural areas
 - ☒ 2. To have services proactively anticipate citizens' needs before they approach the services.
 - ☒ 3. To provide welfare service meant for girl child and women
 - ☒ 4. To help workers to meet their financial needs

Question ID : **7518973960**
Option 1 ID : **75189715839**
Option 2 ID : **75189715838**
Option 3 ID : **75189715837**
Option 4 ID : **75189715840**
Status : **Not Answered**
Chosen Option : --

Q.27 A boat starting from point P goes downstream to point Q in 3 hours and returns back from point Q to the point P in 4 hours. If the speed of the water is 3 km/h, find the speed of the boat in still water.

- Ans
- ☒ 1. 12 km/h
 - ☒ 2. 20 km/h
 - ☒ 3. 21 km/h
 - ☒ 4. 32km/h

Question ID : **7518975711**
Option 1 ID : **75189722841**
Option 2 ID : **75189722844**
Option 3 ID : **75189722842**
Option 4 ID : **75189722843**
Status : **Not Answered**
Chosen Option : --

Q.28

The value of $\frac{1}{(1+\cot^2 x)^2} + \frac{\tan^2 x}{(1+\tan^2 x)^2} + \frac{1}{1+\tan^2 x}$ is:

- Ans
- ☐ 1. 4
 - ☐ 2. 5
 - ☐ 3. 3
 - ☒ 4. 1

Question ID : 7518976387

Option 1 ID : 75189725546

Option 2 ID : 75189725545

Option 3 ID : 75189725547

Option 4 ID : 75189725548

Status : Not Answered

Chosen Option : --

Q.29

L, G, K, P, H and Z live on eight different floors of the same multistorey building with 2 floors being vacant. The lowermost floor in the building is numbered 1, the floor above it, number 2 and so on till the topmost floor is numbered 8. H lives on floor No. 1, K on No. 2, and P on No. 8. One immediate floor above and one immediate floor below Z are vacant. G's floor is immediately above the floor on which L lives and G's floor is also immediately below P's floor. Who lives on floor No. 4?

- Ans
- ☒ 1. Z
 - ☐ 2. G
 - ☐ 3. H
 - ☐ 4. L

Question ID : 7518974726

Option 1 ID : 75189718902

Option 2 ID : 75189718904

Option 3 ID : 75189718903

Option 4 ID : 75189718901

Status : Answered

Chosen Option : 1

Q.30

What is the name of the sacred text of Christianity which consists of two parts: the Old Testament which is essentially the Hebrew text of the time of Jesus; And the New Testament that includes writings about Jesus Christ and the early church?

- Ans
- ☐ 1. De doctrina Christiana
 - ☒ 2. Bible
 - ☐ 3. Book of Psalms
 - ☐ 4. Knowing God Jesus

Question ID : 7518974016

Option 1 ID : 75189716064

Option 2 ID : 75189716061

Option 3 ID : 75189716062

Option 4 ID : 75189716063

Status : Not Answered

Chosen Option : --

Q.31 If the radius of a sphere is increased by 2 cm, then its surface area increases by 704 cm^2 . Using $\pi = \frac{22}{7}$, find the radius of the sphere before the increase.

- Ans
- ☐ 1. 16 cm
 - ☐ 2. 14 cm
 - ☐ 3. 15 cm
 - ☒ 4. 13 cm

Question ID : 7518976364

Option 1 ID : 75189725456

Option 2 ID : 75189725454

Option 3 ID : 75189725455

Option 4 ID : 75189725453

Status : Answered

Chosen Option : 2

Q.32 Monazite ore is found in the sands of which of the following states of India?

- Ans
- ☐ 1. Odisha
 - ☐ 2. Rajasthan
 - ☐ 3. Punjab
 - ☒ 4. Kerala

Question ID : 7518974267

Option 1 ID : 75189717068

Option 2 ID : 75189717065

Option 3 ID : 75189717066

Option 4 ID : 75189717067

Status : Not Answered

Chosen Option : --

Q.33 Which of the following number will replace the question mark (?) and complete the given number series?

45, 52, 61, 73, 90, ?

- Ans
- ☐ 1. 115
 - ☐ 2. 112
 - ☐ 3. 116
 - ☒ 4. 114

Question ID : 7518975064

Option 1 ID : 75189720256

Option 2 ID : 75189720254

Option 3 ID : 75189720253

Option 4 ID : 75189720255

Status : Answered

Chosen Option : 4

Q.34 Select the set in which the numbers are related in the same way as are the numbers of the following sets.

(NOTE: Operations should be performed on the whole numbers, without breaking down the numbers into its constituent digits. E.g. 13 – Operations on 13 such as adding/subtracting/multiplying etc. to 13 can be performed. Breaking down 13 into 1 and 3 and then performing mathematical operations on 1 and 3 are not allowed.)

(11, 64, 3)

(17, 36, 11)

Ans ✓ 1. (24, 169, 11)

✗ 2. (26, 56, 8)

✗ 3. (30, 49, 11)

✗ 4. (21, 144, 32)

Question ID : 7518975302

Option 1 ID : 75189721205

Option 2 ID : 75189721207

Option 3 ID : 75189721208

Option 4 ID : 75189721206

Status : Not Answered

Chosen Option : --

Q.35 The product of two numbers is 1472 and their HCF is 8. Find their LCM.

Ans ✗ 1. 144

✗ 2. 108

✓ 3. 184

✗ 4. 176

Question ID : 7518976047

Option 1 ID : 75189724185

Option 2 ID : 75189724187

Option 3 ID : 75189724186

Option 4 ID : 75189724188

Status : Not Answered

Chosen Option : --

Q.36 Which of the following numbers will replace the question mark (?) in the given series?

16, 18, 27, 55, 120, ?

Ans ✗ 1. 230

✓ 2. 246

✗ 3. 240

✗ 4. 510

Question ID : 7518975292

Option 1 ID : 75189721165

Option 2 ID : 75189721166

Option 3 ID : 75189721167

Option 4 ID : 75189721168

Status : Answered

Chosen Option : 2

Q.37 Article 12 to 35 contained in Part _____ of the Constitution deal with Fundamental Rights.

- Ans**
- ☒ 1. IV
 - ☒ 2. III
 - ☒ 3. I
 - ☒ 4. II

Question ID : **7518974097**
Option 1 ID : **75189716388**
Option 2 ID : **75189716387**
Option 3 ID : **75189716385**
Option 4 ID : **75189716386**
Status : **Not Answered**
Chosen Option : --

Q.38 Ozone depletion in the stratosphere layer of the atmosphere is responsible for which of the following

- Ans**
- ☒ 1. Increase in greenhouse effect
 - ☒ 2. Cooling of Earth's atmosphere
 - ☒ 3. Increase of UV radiations reaching Earth's surface
 - ☒ 4. Increase in infrared radiations in the troposphere

Question ID : **7518974670**
Option 1 ID : **75189718678**
Option 2 ID : **75189718679**
Option 3 ID : **75189718677**
Option 4 ID : **75189718680**
Status : **Not Answered**
Chosen Option : --

Q.39 Hariteja walked to his school at a speed of 4 km/h and returned on a scooter at 20 km/h. His average speed during the two-way journey is:

- Ans**
- ☒ 1. $\frac{20}{3}$ km/h
 - ☒ 2. 8 km/h
 - ☒ 3. 6 km/h
 - ☒ 4. 12 km/h

Question ID : **7518975894**
Option 1 ID : **75189723574**
Option 2 ID : **75189723576**
Option 3 ID : **75189723575**
Option 4 ID : **75189723573**
Status : **Answered**
Chosen Option : **1**

Q.40 Consider the below statements and identify the correct answer.

Statement-I: Ionic compounds are generally brittle and break into pieces when pressure is applied.

Statement-II: Ionic compounds have low melting and boiling points.

- Ans
- ☒ 1. Both the statements are false.
 - ☒ 2. Statement-II is true, and Statement-I is false.
 - ☒ 3. Statement-I is true, and Statement-II is false.
 - ☒ 4. Both the statements are true.

Question ID : 7518973686

Option 1 ID : 75189714742

Option 2 ID : 75189714744

Option 3 ID : 75189714743

Option 4 ID : 75189714741

Status : Not Answered

Chosen Option : --

Q.41 An electric heater rated 1000 W and an electric geyser rated 2000 W are used for 4 hours daily. The energy consumed in 10 days (in kWh) is:

- Ans
- ☒ 1. 120
 - ☒ 2. 1200
 - ☒ 3. 12000
 - ☒ 4. 12

Question ID : 7518975507

Option 1 ID : 75189722026

Option 2 ID : 75189722027

Option 3 ID : 75189722028

Option 4 ID : 75189722025

Status : Not Answered

Chosen Option : --

Q.42

In January 2022, the Zoological Survey of India (ZSI) underlined some green rules for living root bridges of which state to get the UNESCO world heritage site tag?

Ans

☒ 1. Rajasthan

☒ 2. Kerala

☒ 3. Haryana

☒ 4. Meghalaya

Question ID : **7518973901**

Option 1 ID : **75189715603**

Option 2 ID : **75189715601**

Option 3 ID : **75189715604**

Option 4 ID : **75189715602**

Status : **Not Answered**

Chosen Option : --

Q.43

Where was the 2nd National Para Shooting Championship 2022 between 21 and 25 March 2022 held?

Ans

☒ 1. New Delhi

☒ 2. Lakshadweep

☒ 3. Puducherry

☒ 4. Chandigarh

Question ID : **7518976513**

Option 1 ID : **75189726051**

Option 2 ID : **75189726052**

Option 3 ID : **75189726050**

Option 4 ID : **75189726049**

Status : **Not Answered**

Chosen Option : --

Q.44

Who is the Chief Justice of India as on March 2022?

Ans

☒ 1. Uday Umesh Lalit

☒ 2. NV Ramana

☒ 3. Ranjan Gogoi

☒ 4. DY Chandrachud

Question ID : **7518974300**

Option 1 ID : **75189717198**

Option 2 ID : **75189717199**

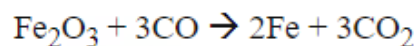
Option 3 ID : **75189717200**

Option 4 ID : **75189717197**

Status : **Answered**

Chosen Option : 2

Q.45 In the given reaction, _____ acts as a reducing agent.



Ans ☒ 1. Fe_2O_3

☒ 2. CO

☒ 3. CO_2

☒ 4. Fe

Question ID : 7518973451

Option 1 ID : 75189713802

Option 2 ID : 75189713804

Option 3 ID : 75189713803

Option 4 ID : 75189713801

Status : Not Answered

Chosen Option : --

Q.46 Which Article of the Constitution of India enshrines one of the Directive Principles of State Policy which lays down that 'the State shall take steps to organise village panchayats and endow them with such powers and authority as may be necessary to enable them to function as units of self-government'?

Ans ☒ 1. Article 48

☒ 2. Article 40

☒ 3. Article 32

☒ 4. Article 37

Question ID : 7518974107

Option 1 ID : 75189716428

Option 2 ID : 75189716427

Option 3 ID : 75189716425

Option 4 ID : 75189716426

Status : Not Answered

Chosen Option : --

Q.47 Shyam walked 10 m towards the north and then turned left and walked 11 m. He then turned right and walked for 13 m, turned right again and walked for 10 m. He then turned left and walked 14 m, and then finally turned right and walked 1 m. How far is Shyam from the starting point?

(All turns are 90 degree turns only)

Ans ☒ 1. 34 m

☒ 2. 33 m

☒ 3. 35 m

☒ 4. 37 m

Question ID : 7518974838

Option 1 ID : 75189719349

Option 2 ID : 75189719351

Option 3 ID : 75189719350

Option 4 ID : 75189719352

Status : Answered

Chosen Option : 4

Q.48 Some features of alveoli are mentioned below. Select the INCORRECT option.

- Ans ☒ 1. Have large surface area
☒ 2. Have extensive network of blood vessels
☒ 3. Are thin walled
☒ 4. Are finger-like structures

Question ID : **7518974582**
Option 1 ID : **75189718326**
Option 2 ID : **75189718328**
Option 3 ID : **75189718327**
Option 4 ID : **75189718325**
Status : **Not Answered**
Chosen Option : --

Q.49 Study the given letter series and answer the question that follows.

Q I O M J E S T R U L E B A C K J M N

How many consonants are immediately preceded by a consonant and immediately followed by a vowel?

- Ans ☒ 1. 3
☒ 2. 2
☒ 3. 1
☒ 4. 4

Question ID : **7518974801**
Option 1 ID : **75189719203**
Option 2 ID : **75189719202**
Option 3 ID : **75189719201**
Option 4 ID : **75189719204**
Status : **Answered**
Chosen Option : 2

Q.50 A certain number of people are sitting in a row, facing north. D is to the immediate right of H. A is third to the left of C. Only three people sit between H and L. L is fifth to the right of C. D is at the extreme right end of the row. If no other person is sitting in the row, what is the total number of persons seated?

- Ans ☒ 1. 16
☒ 2. 14
☒ 3. 18
☒ 4. 12

Question ID : **7518974923**
Option 1 ID : **75189719691**
Option 2 ID : **75189719690**
Option 3 ID : **75189719692**
Option 4 ID : **75189719689**
Status : **Answered**
Chosen Option : 2

Q.51 In a certain code language, 'CURRY' is written as 'BSONT' and 'KHAKE' is written as 'JFXGD'. How will 'BHEEM' be written in that language?

- Ans**
- ✓ 1. AFBAB
 - ✗ 2. AFBBI
 - ✗ 3. CFBBH
 - ✗ 4. AEBBI

Question ID : 7518974828
Option 1 ID : 75189719312
Option 2 ID : 75189719309
Option 3 ID : 75189719310
Option 4 ID : 75189719311

Status : Answered

Chosen Option : 1

Q.52 The conversion of ethanol to ethanoic acid is an example of which of the following reactions?

- Ans**
- ✗ 1. Addition reaction
 - ✓ 2. Oxidation reaction
 - ✗ 3. Combustion reaction
 - ✗ 4. Substitution reaction

Question ID : 7518973536
Option 1 ID : 75189714143
Option 2 ID : 75189714142
Option 3 ID : 75189714141
Option 4 ID : 75189714144

Status : Not Answered

Chosen Option : --

Q.53 Which of the following statements in Economics is NOT correct?

- Ans**
- ✗ 1. Average fixed cost curve is downward sloping.
 - ✗ 2.

Total cost is the sum of the total variable cost and the total fixed cost.

- ✓ 3. In the long run, all inputs are fixed.
- ✗ 4.

Short run marginal cost, average variable cost and short run average cost curves are 'U'-shaped.

Question ID : 7518974242
Option 1 ID : 75189716966
Option 2 ID : 75189716965
Option 3 ID : 75189716968
Option 4 ID : 75189716967

Status : Not Answered

Chosen Option : --

Q.54

In January 2022, India's first para-badminton academy was launched in which state?

Ans

- ☐ 1. Punjab
- ☒ 2. Uttar Pradesh
- ☐ 3. Haryana
- ☐ 4. Jharkhand

Question ID : 7518973754

Option 1 ID : 75189715016

Option 2 ID : 75189715014

Option 3 ID : 75189715013

Option 4 ID : 75189715015

Status : Not Answered

Chosen Option : --

Q.55 The S.I unit of induced potential difference is:

Ans

- ☐ 1. mV
- ☐ 2. A
- ☒ 3. V
- ☐ 4. mA

Question ID : 7518975536

Option 1 ID : 75189722144

Option 2 ID : 75189722141

Option 3 ID : 75189722143

Option 4 ID : 75189722142

Status : Not Answered

Chosen Option : --

Q.56 How much angular distance will be covered by the minute hand of a correct clock in a period of 3 hours 10 minutes?

Ans

- ☐ 1. 1000°
- ☐ 2. 1202°
- ☐ 3. 978°
- ☒ 4. 1140°

Question ID : 7518976434

Option 1 ID : 75189725734

Option 2 ID : 75189725736

Option 3 ID : 75189725733

Option 4 ID : 75189725735

Status : Not Answered

Chosen Option : --

Q.57 Three statements are given, followed by two conclusions numbered I and II. Assuming the statements to be true, even if they seem to be at variance with commonly known facts, decide which of the conclusions logically follow(s) from the statements.

Statements:

Some purses are keys.

All lockers are keys.

All keys are pins.

Conclusions:

I. Some pins are purses.

II. No pin is a purse.

Ans

- ✓ 1. Only conclusion I follows
- ✗ 2. Both conclusions I and II follow
- ✗ 3. Either conclusion I or II follows
- ✗ 4. Only conclusion II follows

Question ID : 7518975170

Option 1 ID : 75189720677

Option 2 ID : 75189720679

Option 3 ID : 75189720680

Option 4 ID : 75189720678

Status : Answered

Chosen Option : 1

Q.58 In which part of the leaves do massive amounts of gaseous exchange take place during respiration?

Ans

- ✓ 1. Stomata
- ✗ 2. Grana
- ✗ 3. Chlorophyll
- ✗ 4. Thylakoid

Question ID : 7518974331

Option 1 ID : 75189717321

Option 2 ID : 75189717322

Option 3 ID : 75189717324

Option 4 ID : 75189717323

Status : Not Answered

Chosen Option : --

Q.59

How many private banks were nationalised by Indra Gandhi during the Fourth Five Year Plan in 1969?

Ans

✓ 1. 14

✗ 2. 10

✗ 3. 17

✗ 4. 24

Question ID : **7518973882**

Option 1 ID : **75189715525**

Option 2 ID : **75189715527**

Option 3 ID : **75189715528**

Option 4 ID : **75189715526**

Status : **Not Answered**

Chosen Option : --

Q.60

Read the given statement and conclusions carefully. Assuming that the information given in the statements is true, decide which of the given conclusions logically follow(s) from the statement.

Statement:

Team A students lost 14 out of 20 games they played last season.

Conclusions:

I. Team A students are more interested in academics than sports.

II. Team A students are unlucky.

Ans

✗ 1. Both conclusions I and II follow

✓ 2. Neither conclusion I nor II follows

✗ 3. Only conclusion II follows

✗ 4. Only conclusion I follows

Question ID : **7518976413**

Option 1 ID : **75189725652**

Option 2 ID : **75189725651**

Option 3 ID : **75189725650**

Option 4 ID : **75189725649**

Status : **Answered**

Chosen Option : 2

Q.61 In some women, oviducts are blocked. These women are unable to bear babies because sperms cannot reach the egg for fertilisation. The doctors advise IVF (in vitro fertilisation) in such cases. Below are given some steps of the procedure. Select the INCORRECT step.

Ans ✓ 1.

Zygote is kept outside and development takes place in a test tube

- ✗ 2. Fusion of egg and sperms is done outside the body
- ✗ 3. Complete development takes place in the uterus
- ✗ 4. Zygote is formed and after a week placed in the uterus

Question ID : 7518974616

Option 1 ID : 75189718464

Option 2 ID : 75189718461

Option 3 ID : 75189718463

Option 4 ID : 75189718462

Status : Not Answered

Chosen Option : --

Q.62 Which of the following will be the next member of the homologous series of hexene?

- Ans**
- ✗ 1. Pentene
 - ✗ 2. Pentane
 - ✗ 3. Heptane
 - ✓ 4. Heptene

Question ID : 7518973410

Option 1 ID : 75189713639

Option 2 ID : 75189713637

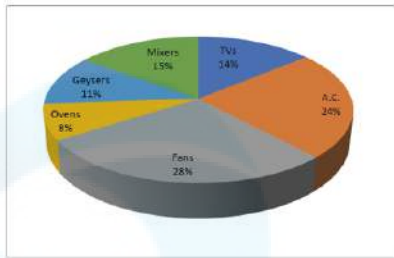
Option 3 ID : 75189713638

Option 4 ID : 75189713640

Status : Not Answered

Chosen Option : --

Q.63 The following chart shows the percentage of various products sold from an electronics goods shop during the year 2021.
The total number of products sold from the shop during 2021 is 16800. Study the chart and answer the question.



How many more Fans have been sold from the shop in comparison to Ovens during 2021?

- Ans
- ☒ 1. 3566
 - ☒ 2. 3360
 - ☒ 3. 3420
 - ☒ 4. 3200

Question ID : 7518975339

Option 1 ID : 75189721356

Option 2 ID : 75189721354

Option 3 ID : 75189721355

Option 4 ID : 75189721353

Status : Answered

Chosen Option : 2

Q.64 Some features of the circulatory system in humans are mentioned below. Select the INCORRECT option.

- Ans
- ☒ 1. Lymph is also called tissue fluid
 - ☒ 2. Platelets help in clotting of blood
 - ☒ 3. Capillaries join to form veins
 - ☒ 4. Hypertension is caused by constriction of veins

Question ID : 7518974596

Option 1 ID : 75189718384

Option 2 ID : 75189718381

Option 3 ID : 75189718382

Option 4 ID : 75189718383

Status : Not Answered

Chosen Option : --

Q.65 The sum of the first 8 prime numbers divided by 7 is equal to _____

- Ans
- ☒ 1. 14
 - ☒ 2. 11
 - ☒ 3. 13
 - ☒ 4. 10

Question ID : 7518975580

Option 1 ID : 75189722320

Option 2 ID : 75189722317

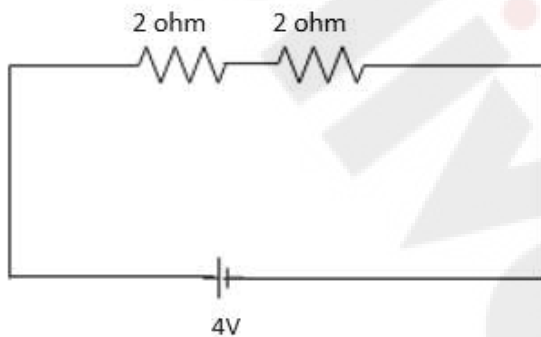
Option 3 ID : 75189722319

Option 4 ID : 75189722318

Status : Answered

Chosen Option : 2

Q.66 Calculate the total current in the circuit given below:



- Ans
- ☒ 1. 8A
 - ☒ 2. 4A
 - ☒ 3. 2A
 - ☒ 4. 1A

Question ID : 7518975472

Option 1 ID : 75189721888

Option 2 ID : 75189721887

Option 3 ID : 75189721886

Option 4 ID : 75189721885

Status : Not Answered

Chosen Option : --

Q.67 Find the value of $7 + \{4 + 3 \text{ of } 4 - (5 + 3 - 6 \div 2)\}$.

- Ans
- ☒ 1. 21
 - ☒ 2. 15
 - ☒ 3. 18
 - ☒ 4. 17

Question ID : 7518976007
Option 1 ID : 75189724026
Option 2 ID : 75189724027
Option 3 ID : 75189724025
Option 4 ID : 75189724028
Status : Answered
Chosen Option : 3

Q.68 The Gua mines of Jharkhand is associated with which of the following minerals?

- Ans
- ☒ 1. Bauxite
 - ☒ 2. Iron-ore
 - ☒ 3. Zinc
 - ☒ 4. Coal

Question ID : 7518976491
Option 1 ID : 75189725964
Option 2 ID : 75189725961
Option 3 ID : 75189725963
Option 4 ID : 75189725962
Status : Not Answered
Chosen Option : --

Q.69 In human males, why are testes present outside the abdominal cavity in a pouch called scrotum?

- Ans
- ☒ 1. It helps in maintaining low pressure than the body for sperm formation
 - ☒ 2. It secretes hormones for sperm formation
 - ☒ 3. It helps in maintaining temperature 2-3 degrees lower than the body for sperm formation
 - ☒ 4. It is richly supplied by blood vessels needed for sperm formation

Question ID : 7518974613
Option 1 ID : 75189718451
Option 2 ID : 75189718452
Option 3 ID : 75189718450
Option 4 ID : 75189718449
Status : Not Answered
Chosen Option : --

Q.70 Select the set in which the numbers are related in the same way as are the numbers of the following sets.

(NOTE : Operations should be performed on the whole numbers, without breaking down the numbers into its constituent digits. E.g. 13 – Operations on 13 such as adding / subtracting /multiplying etc. to 13 can be performed. Breaking down 13 into 1 and 3 and then performing mathematical operations on 1 and 3 is not allowed)

(5, 62, 7)

(8, 188, 12)

- Ans**
- ☒ 1. 6, 117, 19
 - ☒ 2. 11, 390, 13
 - ☒ 3. 10, 181, 9
 - ☒ 4. 7, 114, 9

Question ID : 7518974868

Option 1 ID : 75189719469

Option 2 ID : 75189719470

Option 3 ID : 75189719471

Option 4 ID : 75189719472

Status : Not Answered

Chosen Option : --

Q.71 Simplify: $\frac{3}{2}x^2 + 2x - \frac{3}{2} + \frac{x^2}{2} - 6x + \frac{1}{2}$.

- Ans**
- ☒ 1. $2x^2 - 4x + 1$
 - ☒ 2. $2x^2 + 4x + 1$
 - ☒ 3. $2x^2 - 4x - 1$
 - ☒ 4. $2x^2 + 4x - 1$

Question ID : 7518975909

Option 1 ID : 75189723633

Option 2 ID : 75189723636

Option 3 ID : 75189723634

Option 4 ID : 75189723635


Status : Answered


Chosen Option : 3


Q.72 Which of the following is/are useful effort(s) for sustainability of resources?

- a. Switching off unnecessary lights and fans
- b. Using lift instead of stairs
- c. Repairing leaking taps for conserving water
- d. Using empty containers to store things
- e. Going to school by your own car instead of cycling

Ans  1. b and e

 2. Only e

 3. Only b

 4. a, c and d

Question ID : **7518974710**

Option 1 ID : **75189718840**

Option 2 ID : **75189718839**

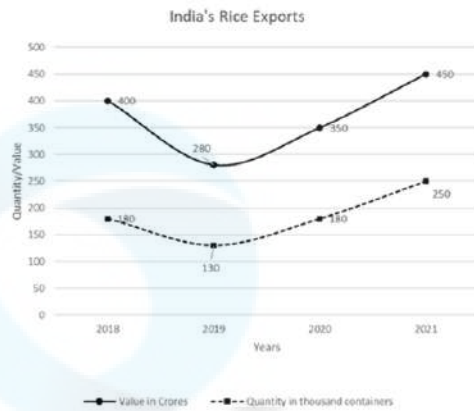
Option 3 ID : **75189718837**

Option 4 ID : **75189718838**

Status : **Answered**

Chosen Option : **4**

Q.73 Study the following line graph carefully and answer the question.



Supposing if in 2020, the average value of goods sold per container was same as that of 2019, then what would be the new approximate value of total exports (in crores) in 2020 if number of containers in 2020 remains unchanged?

- Ans**
- ☒ 1. 555
 - ☒ 2. 500
 - ☒ 3. 346
 - ☒ 4. 387

Question ID : **7518975114**

Option 1 ID : **75189720454**

Option 2 ID : **75189720456**

Option 3 ID : **75189720455**

Option 4 ID : **75189720453**

Status : **Not Answered**

Chosen Option : --

Q.74 Eight persons, A, B, C, D, E, F, G and H, are sitting around a square table facing the centre of the table. Four of them are sitting at the corners while the other four are sitting at the exact centre of the sides of the table. C is sitting at one of the corners. F is to the immediate right of C. Only H is sitting between C and G. D is sitting at one of the corners. A is not sitting at any of the corners. E is to the immediate left of B. E is the immediate neighbour of F. Which two persons are sitting towards the left of G but to the right of B?

- Ans**
- ☒ 1. C and H
 - ☒ 2. A and F
 - ☒ 3. A and E
 - ☒ 4. A and D

Question ID : **7518975136**

Option 1 ID : **75189720542**

Option 2 ID : **75189720544**

Option 3 ID : **75189720541**

Option 4 ID : **75189720543**

Status : **Answered**

Chosen Option : **4**

Q.75 _____ is the money that is available from an individual's salary after he/she pays local, state, and federal taxes.

- Ans**
- ☐ 1. Personal Income
 - ☐ 2. Per Capita Income
 - ☒ 3. Disposable Income
 - ☐ 4. National Income

Question ID : **7518974043**
Option 1 ID : **75189716170**
Option 2 ID : **75189716172**
Option 3 ID : **75189716169**
Option 4 ID : **75189716171**
Status : **Not Answered**
Chosen Option : --

Q.76 A and B together complete a work in 8 days. If B is 25% more efficient than A, then in how many days will A alone complete the same work?

- Ans**
- ☐ 1. 24 days
 - ☐ 2. 12 days
 - ☒ 3. 18 days
 - ☐ 4. 6 days

Question ID : **7518976096**
Option 1 ID : **75189724383**
Option 2 ID : **75189724381**
Option 3 ID : **75189724382**
Option 4 ID : **75189724384**
Status : **Answered**
Chosen Option : **3**

Q.77 L, M, N, O, P, Q and R, are sitting in a straight row, facing north. Only three people sit between Q and N. M and O are immediate neighbours. O is at the extreme right end of the row. R is at the immediate left of N. Who is at the fifth position from the left end of the row?

- Ans**
- ☐ 1. P
 - ☒ 2. N
 - ☐ 3. L
 - ☐ 4. M

Question ID : **7518974904**
Option 1 ID : **75189719614**
Option 2 ID : **75189719615**
Option 3 ID : **75189719613**
Option 4 ID : **75189719616**
Status : **Answered**
Chosen Option : **2**

Q.78 Which of the following triads is NOT a Dobereiner's triad?

- (i) Li, Na, K
- (ii) Ca, Sr, Ba
- (iii) N, P, Sb
- (iv) Cl, Br, I

Ans ☒ 1. Only ii
☒ 2. Only i
☒ 3. Only iii
☒ 4. Only iv

Question ID : 7518973698
Option 1 ID : 75189714790
Option 2 ID : 75189714789
Option 3 ID : 75189714791
Option 4 ID : 75189714792
Status : Not Answered
Chosen Option : --

Q.79 Saga Dawa festival is celebrated in which of the following Indian states?

Ans ☒ 1. Uttar Pradesh
☒ 2. Madhya Pradesh
☒ 3. Arunachal Pradesh
☒ 4. Kerala

Question ID : 7518973810
Option 1 ID : 75189715240
Option 2 ID : 75189715239
Option 3 ID : 75189715238
Option 4 ID : 75189715237
Status : Not Answered
Chosen Option : --

Q.80 What will come in place of the question mark (?) in the following equation if '+' and '×' are interchanged and also '-' and '÷' are interchanged?

$$42 \div 7 \div 24 \times 6 - 3 = ?$$

- Ans
- ☐ 1. 13
 - ☒ 2. 12
 - ☐ 3. 10
 - ☐ 4. 14

Question ID : 7518975325

Option 1 ID : 75189721299

Option 2 ID : 75189721298

Option 3 ID : 75189721297

Option 4 ID : 75189721300

Status : Answered

Chosen Option : 2

Q.81 A statement is given, followed by four conclusions given in the options. Find out which conclusion is true based on the given statement.

Statement: $G < D < R = T > Y > Q = H$

- Ans
- ☐ 1. $G = T$
 - ☒ 2. $D < T$
 - ☐ 3. $H > T$
 - ☐ 4. $R < G$

Question ID : 7518975190

Option 1 ID : 75189720760

Option 2 ID : 75189720758

Option 3 ID : 75189720759

Option 4 ID : 75189720757

Status : Answered

Chosen Option : 2

Q.82 In this question, a statement is followed by two conclusions. Which of the two conclusions is/are true with respect to the statement?

Statement: $A = F \geq S > H < Z > R = G$

Conclusions:

I. $S < G$

II. $S \geq A$

- Ans
- ☐ 1. Only conclusion I is true
 - ☐ 2. Only conclusion II is true
 - ☐ 3. Both conclusions I and II are true
 - ☒ 4. Neither conclusion I nor II is true

Question ID : 7518974962

Option 1 ID : 75189719845

Option 2 ID : 75189719846

Option 3 ID : 75189719847

Option 4 ID : 75189719848

Status : Answered

Chosen Option : 4

Q.83 Which of the following is a quadratic equation whose roots are $\frac{7}{3}$ and $\frac{12}{5}$?

- Ans
- ☒ 1. $15x^2 - 70x + 84 = 0$
 - ☒ 2. $15x^2 - 72x + 84 = 0$
 - ☒ 3. $x^2 - 71x + 84 = 0$
 - ☒ 4. $15x^2 - 71x + 84 = 0$

Question ID : 7518975735

Option 1 ID : 75189722937

Option 2 ID : 75189722938

Option 3 ID : 75189722939

Option 4 ID : 75189722940

Status : Answered

Chosen Option : 4

Q.84 A cuboidal block, 12 cm by 24 cm by 30 cm, is cut up into an exact number of identical cubes. The least possible number of such cubes is:

- Ans
- ☒ 1. 45
 - ☒ 2. 40
 - ☒ 3. 55
 - ☒ 4. 50

Question ID : 7518976369

Option 1 ID : 75189725475

Option 2 ID : 75189725476

Option 3 ID : 75189725473

Option 4 ID : 75189725474

Status : Not Answered

Chosen Option : --

Q.85 Find the value of $\sqrt{\frac{0.030625}{0.001225}}$.

- Ans
- ☒ 1. 25
 - ☒ 2. 15
 - ☒ 3. 20
 - ☒ 4. 5

Question ID : 7518976015

Option 1 ID : 75189724059

Option 2 ID : 75189724058

Option 3 ID : 75189724060

Option 4 ID : 75189724057

Status : Marked For Review

Chosen Option : 4

Q.86 A convex lens produces a magnification of -3 for an object placed at 1.5 m from the lens. Find the image distance (with correct sign).

- Ans
- ☒ 1. -4.5 m
 - ☒ 2. 4.5 m
 - ☒ 3. 0.5 m
 - ☒ 4. -0.5 m

Question ID : **7518975415**
Option 1 ID : **75189721658**
Option 2 ID : **75189721657**
Option 3 ID : **75189721659**
Option 4 ID : **75189721660**
Status : **Not Answered**
Chosen Option : --

Q.87 Each vowel in the word OPTICAL is changed to the letter following it in the English alphabetical order and each consonant is changed to the letter preceding it in the English alphabetical order. Which of the following letters will appear twice in the group of letters thus formed?

- Ans
- ☒ 1. J
 - ☒ 2. P
 - ☒ 3. O
 - ☒ 4. B

Question ID : **7518974794**
Option 1 ID : **75189719176**
Option 2 ID : **75189719173**
Option 3 ID : **75189719174**
Option 4 ID : **75189719175**
Status : **Answered**
Chosen Option : 4

Q.88 Which of the following options states the different ways of excretion in plants?

- Ans
- ☒ 1. Transpiration, diffusion and storage
 - ☒ 2. Only diffusion and storage
 - ☒ 3. Only transpiration and diffusion
 - ☒ 4. Only transpiration and storage

Question ID : **7518974560**
Option 1 ID : **75189718240**
Option 2 ID : **75189718239**
Option 3 ID : **75189718237**
Option 4 ID : **75189718238**
Status : **Not Answered**
Chosen Option : --

Q.89 In the given letter-cluster pairs, the first letter-cluster is related to the second letter-cluster following a certain logic. Study the given pairs carefully, and from the given options, select the pair that follows the same logic.

HCM : MHR

FET : KJY

- Ans**
- ☒ 1. PRT : TPS
 - ☒ 2. UFL : LKU
 - ☒ 3. GHK : HKJ
 - ☒ 4. UPJ : ZUO

Question ID : 7518974852

Option 1 ID : 75189719405

Option 2 ID : 75189719408

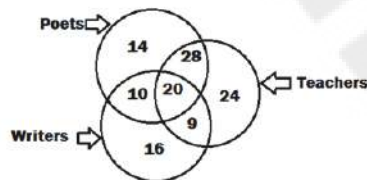
Option 3 ID : 75189719406

Option 4 ID : 75189719407

Status : Answered

Chosen Option : 4

Q.90 Study the given diagram carefully and answer the question. The numbers in different sections indicate the number of persons.



Which of the following statements is correct on the basis of the above diagram?

- Ans**
- ☒ 1. The number of teachers who are both writers and poets is 20.
 - ☒ 2. The number of poets who are also teachers but not writers is 48.
 - ☒ 3. The number of poets who are also teachers is 44.
 - ☒ 4. The number of writers who are neither teachers nor poets is 10.

Question ID : 7518975186

Option 1 ID : 75189720741

Option 2 ID : 75189720742

Option 3 ID : 75189720744

Option 4 ID : 75189720743

Status : Answered

Chosen Option : 1

Q.91

In January 2022, which village became the first open-defecation free (ODF) Plus village of Mizoram?

Ans

- ☐ 1. Khanpui
- ☐ 2. Selam
- ☐ 3. Dulte
- ☒ 4. South Maubuang

Question ID : **7518973791**

Option 1 ID : **75189715161**

Option 2 ID : **75189715162**

Option 3 ID : **75189715164**

Option 4 ID : **75189715163**

Status : **Not Answered**

Chosen Option : --

Q.92

A magnet, when moved near a coil, produces an induced potential difference in the coil. What happens when we increase the speed of the magnet near the coil?

Ans

- ☐ 1. The induced potential difference remains the same.
- ☒ 2. The induced potential difference in the coil increases.
- ☐ 3. The induced current in the coil remains the same.
- ☐ 4. The induced potential difference in the coil decreases.

Question ID : **7518975538**

Option 1 ID : **75189722151**

Option 2 ID : **75189722149**

Option 3 ID : **75189722152**

Option 4 ID : **75189722150**

Status : **Not Answered**

Chosen Option : --

Q.93 P started from a point facing north and then turned right and ran for 24 m east, turned left and walked for 26 m. He then turned left and first ran for 24 m and then walked for 6 m and then turned right and walked for 6 m, turned right again, and ran for 30 m. How much distance did he cover walking, and in which direction is he facing now?

(All turns are 90 degree turns only)

- Ans ☒ 1. 38 m, East
☐ 2. 38 m, West
☐ 3. 126 m, East
☐ 4. 126 m, West

Question ID : 7518974847

Option 1 ID : 75189719386

Option 2 ID : 75189719385

Option 3 ID : 75189719388

Option 4 ID : 75189719387

Status : Answered

Chosen Option : 3

Q.94 Which of the following is NOT a property of similar triangles?

- Ans ☐ 1.
Ratio of corresponding sides = Ratio of corresponding altitudes
☐ 2.
Ratio of corresponding sides = Ratio of corresponding perimeters
☐ 3.
Ratio of corresponding sides = Ratio of corresponding medians
☒ 4. Ratio of any two angles = Ratio of any two medians

Question ID : 7518975989

Option 1 ID : 75189723955

Option 2 ID : 75189723953

Option 3 ID : 75189723954

Option 4 ID : 75189723956

Status : Not Answered

Chosen Option : --

Q.95 Each vowel in the word INCURABLE is changed to the letter following it in the English alphabetical order and each consonant is changed to the letter preceding it in the English alphabetical order. How many vowels will be there in the new word thus formed?

- Ans ☒ 1. 1
☐ 2. 4
☐ 3. 3
☐ 4. 2

Question ID : 7518974795

Option 1 ID : 75189719178

Option 2 ID : 75189719180

Option 3 ID : 75189719179

Option 4 ID : 75189719177

Status : Answered

Chosen Option : 1

Q.96 As of July 2022, what is the required age bracket of a subscriber to the Atal Pension Yojana?

- Ans
- ☒ 1. 14-35 years
 - ☒ 2. 16-25 years
 - ☒ 3. 18-40 years
 - ☒ 4. 21-60 years

Question ID : **7518976554**

Option 1 ID : **75189726216**

Option 2 ID : **75189726213**

Option 3 ID : **75189726214**

Option 4 ID : **75189726215**

Status : **Answered**

Chosen Option : **3**

Q.97 Find x, if the median is 28.5.

CI	0-10	10-20	20-30	30-40	40-50	50-60
F	5	X	20	15	7	5

- Ans
- ☒ 1. 8
 - ☒ 2. 7
 - ☒ 3. 2
 - ☒ 4. 4

Question ID : **7518975685**

Option 1 ID : **75189722739**

Option 2 ID : **75189722740**

Option 3 ID : **75189722737**

Option 4 ID : **75189722738**

Status : **Not Answered**

Chosen Option : **--**

Q.98 A spherical mirror converges a beam of light, at a given point on the principal axis. Which of the following statement(s) about the mirror is/are true?

- (a) The mirror used is concave
- (b) The mirror has positive focal length
- (c) The point of convergence is the principal focus of the mirror

Ans ☒ 1. Both (a) and (b)

☒ 2. Only (a)

☒ 3. Only (b)

☒ 4. Both (a) and (c)

Question ID : 7518975365

Option 1 ID : 75189721460

Option 2 ID : 75189721457

Option 3 ID : 75189721458

Option 4 ID : 75189721459

Status : Not Answered

Chosen Option : --

Q.99 An electric heater is rated 2200 W at 220 V. The minimum rating of the fuse wire to be connected to the device is:

Ans ☒ 1. 20 A

☒ 2. 5 A

☒ 3. 10 A

☒ 4. 22 A

Question ID : 7518975504

Option 1 ID : 75189722015

Option 2 ID : 75189722013

Option 3 ID : 75189722014

Option 4 ID : 75189722016

Status : Not Answered

Chosen Option : --

Q.100 What is the correct order of metallic character of the following metals?

Ans ☒ 1. Ba < Cs < Mg < Na

☒ 2. Cs < Ba < Na < Mg

☒ 3. Na < Mg < Cs < Ba

☒ 4. Mg < Na < Ba < Cs

Question ID : 7518973737

Option 1 ID : 75189714948

Option 2 ID : 75189714947

Option 3 ID : 75189714946

Option 4 ID : 75189714945

Status : Not Answered

Chosen Option : --