



रेल भर्ती बोर्ड / RAILWAY RECRUITMENT BOARDS
सी ई एन आर आर सी - ०१/२०१९ - CEN RRC - 01/2019



Roll Number	
Candidate Name	
Test Center Name	Informatic Computer Education. Patliputra
Test Date	08/09/2022
Test Time	5:00 PM - 6:30 PM
Subject	Level 1

* Note

Correct Answer will carry 1 mark per Question.
Incorrect Answer will carry 1/3 Negative mark per Question.

- Options shown in green color with a tick icon are correct.
- Chosen option on the right of the question indicates the option selected by the candidate.

Section : Level 1

Q.1 Roots of the equation $x^2 - 5x - 14 = 0$ are:

- Ans 1. 7, -2
 2. 3, -2
 3. 5, -3
 4. 2, -7

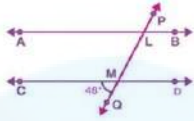
Question ID : 7518979304
Option 1 ID : 75189737213
Option 2 ID : 75189737215
Option 3 ID : 75189737216
Option 4 ID : 75189737214
Status : Answered
Chosen Option : 1

Q.2 Five friends V, W, X, Y, and Z are eating dinner around a circular dining table, facing the centre.
X is an immediate neighbour of both Z and W. V is sitting to the immediate left of W. Y is sitting second to the left of W. Who is sitting to the immediate left of X?

- Ans 1. W
 2. Y
 3. V
 4. Z

Question ID : 7518977884
Option 1 ID : 75189731534
Option 2 ID : 75189731536
Option 3 ID : 75189731535
Option 4 ID : 75189731533
Status : Answered
Chosen Option : 1

Q.3 In the given figure, AB and CD are parallel lines intersected by a transversal PQ at L and M, respectively. If $\angle CMQ = 48^\circ$, then $\angle PLA$ is:



- Ans**
- 1. 110°
 - 2. 132°
 - 3. 125°
 - 4. 120°

Question ID : 7518979331

Option 1 ID : 75189737321

Option 2 ID : 75189737323

Option 3 ID : 75189737324

Option 4 ID : 75189737322

Status : Answered

Chosen Option : 2

Q.4 The marked price of an item is ₹250 and a shopkeeper allows a discount of 30%. The selling price of the item is:

- Ans**
- 1. ₹195
 - 2. ₹165
 - 3. ₹185
 - 4. ₹175

Question ID : 7518978689

Option 1 ID : 75189734753

Option 2 ID : 75189734756

Option 3 ID : 75189734754

Option 4 ID : 75189734755

Status : Answered

Chosen Option : 4

Q.5 An object is placed in front of a concave mirror at a point beyond its centre of curvature C. The image is formed at a point _____ and is _____.

- Ans**
- 1. between F and C, diminished
 - 2. beyond C, diminished
 - 3. beyond C, enlarged
 - 4. between F and C, enlarged

Question ID : 7518976574

Option 1 ID : 75189726293

Option 2 ID : 75189726296

Option 3 ID : 75189726295

Option 4 ID : 75189726294

Status : Answered

Chosen Option : 1

Q.6 A concave mirror is made from a section of the surface of a sphere of radius 8.0 cm. Its principal focus is at a distance of _____ from its pole.

- Ans**
- 1. 8.0 cm
 - 2. 12.0 cm
 - 3. 4.0 cm
 - 4. 16.0 cm

Question ID : 7518976591
Option 1 ID : 75189726362
Option 2 ID : 75189726363
Option 3 ID : 75189726361
Option 4 ID : 75189726364
Status : Answered
Chosen Option : 3

Q.7 Which of the following numbers will replace the question mark (?) in the given series?

25, 23, 29, 28, 33, 33, ?

- Ans**
- 1. 35
 - 2. 38
 - 3. 37
 - 4. 34

Question ID : 7518977717
Option 1 ID : 75189730867
Option 2 ID : 75189730866
Option 3 ID : 75189730868
Option 4 ID : 75189730865
Status : Answered
Chosen Option : 3

Q.8 Which of the following metals is most metallic in nature?

- Ans**
- 1. Rb
 - 2. Li
 - 3. Cs
 - 4. Na

Question ID : 7518973531
Option 1 ID : 75189714122
Option 2 ID : 75189714121
Option 3 ID : 75189714124
Option 4 ID : 75189714123
Status : Answered
Chosen Option : 4

Q.9 _____ is a newsletter published by the Small Industries Development Bank of India (SIDBI) and Equifax.

- Ans**
- 1. Microfinance Times
 - 2. Microfinance Pulse
 - 3. Microfinance World
 - 4. Microfinance Now

Question ID : 7518978548

Option 1 ID : 75189734190

Option 2 ID : 75189734189

Option 3 ID : 75189734192

Option 4 ID : 75189734191

Status : Answered

Chosen Option : 2

Q.10 This question is based on the five, three-digit numbers given below.

(Left) 634 145 317 534 621 (Right)

(Example: 697 – first digit = 6, second digit = 9, third digit = 7)

NOTE: All operations to be done from left to right.

What will be the resultant if the third digit of the largest number is added to the second digit of smallest number?

- Ans**
- 1. 8
 - 2. 9
 - 3. 4
 - 4. 7

Question ID : 7518979177

Option 1 ID : 75189736706

Option 2 ID : 75189736707

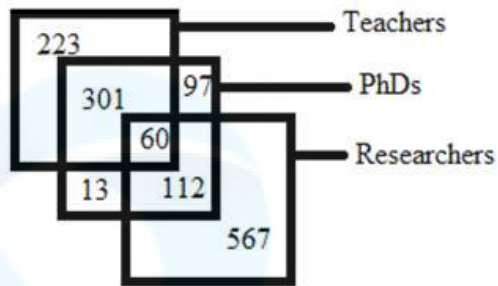
Option 3 ID : 75189736705

Option 4 ID : 75189736708

Status : Answered

Chosen Option : 1

Q.11 Study the Venn Diagram given below and answer the question that follows.



How many PhDs are neither teachers nor researchers?

- Ans
- 1. 60
 - 2. 112
 - 3. 110
 - 4. 301

Question ID : 7518977917
Option 1 ID : 75189731667
Option 2 ID : 75189731666
Option 3 ID : 75189731665
Option 4 ID : 75189731668

Status : Answered

Chosen Option : 3

Q.12 Which of the following Indian states received the maximum of its rainfall from the Northeast Monsoon in 2021?

- Ans
- 1. Gujarat
 - 2. Haryana
 - 3. Uttar Pradesh
 - 4. Tamil Nadu

Question ID : 7518974262
Option 1 ID : 75189717047
Option 2 ID : 75189717045
Option 3 ID : 75189717046
Option 4 ID : 75189717048

Status : Answered

Chosen Option : 3

Q.13 The guardian of the Constitution of India is:

Ans 1. the Supreme Court

2. the President

3. the Rajya Sabha

4. the Lok Sabha

Question ID : 7518974299

Option 1 ID : 75189717194

Option 2 ID : 75189717193

Option 3 ID : 75189717196

Option 4 ID : 75189717195

Status : Answered

Chosen Option : 2

Q.14 Consider the following statements about an electric motor:

(a) It uses a commutator that reverses the direction of the current in the coil after each half rotation.

(b) The direction of the force on an arm of the coil can be found using Fleming's left hand rule.

Which of the above statements is/are correct?

Ans 1. Only (a)

2. Both (a) and (b)

3. Neither (a) nor (b)

4. Only (b)

Question ID : 7518976743

Option 1 ID : 75189726971

Option 2 ID : 75189726970

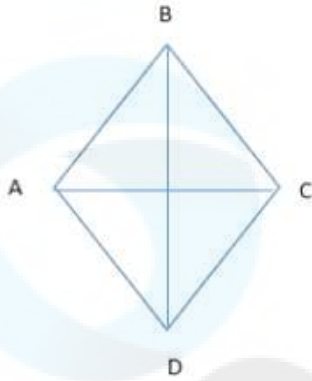
Option 3 ID : 75189726969

Option 4 ID : 75189726972

Status : Answered

Chosen Option : 2

Q.15 If ABCD is a rhombus such that $\angle ACB = 50^\circ$, then $\angle BDC$ will be:



- Ans
- 1. 55°
 - 2. 50°
 - 3. 40°
 - 4. 60°

Question ID : 7518979343
Option 1 ID : 75189737371
Option 2 ID : 75189737370
Option 3 ID : 75189737369
Option 4 ID : 75189737372

Status : Answered

Chosen Option : 3

Q.16 Six boxes of different food items are kept in a row on the dining table. The box with toffees is kept at one end. There are three boxes kept between the box with toffees and the box with chocolates. The box with ice cream is not kept with the toffee box or the fruit-jam box. Cookies and pancakes boxes are kept with the ice cream box. Which of the following box is kept at an end?

- Ans
- 1. Fruit-jam
 - 2. Cookies
 - 3. Chocolates
 - 4. Pancake

Question ID : 7518977902
Option 1 ID : 75189731605
Option 2 ID : 75189731608
Option 3 ID : 75189731606
Option 4 ID : 75189731607

Status : Answered

Chosen Option : 1

Q.17 The value of $5\sqrt{6} - \sqrt{[3(4-2)]} + \left(\frac{12}{\sqrt{6}}\right)$ is:

- Ans
- 1. $8\sqrt{6}$
 - 2. $7\sqrt{6}$
 - 3. $5\sqrt{6}$
 - 4. $6\sqrt{6}$

Question ID : 7518979207

Option 1 ID : 75189736828

Option 2 ID : 75189736827

Option 3 ID : 75189736825

Option 4 ID : 75189736826

Status : Answered

Chosen Option : 4

Q.18 Study the figures A and B carefully. What is the reason for the increase in volume in dough B?



A



B

- Ans
- 1. Alcohol is produced that increases the volume
 - 2. CO_2 produced during respiration increases the volume
 - 3. Lactic acid is produced that increases the volume
 - 4. Water is produced that increases the volume

Question ID : 7518974538

Option 1 ID : 75189718150

Option 2 ID : 75189718149

Option 3 ID : 75189718151

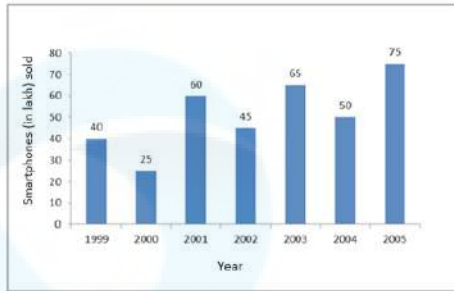
Option 4 ID : 75189718152

Status : Answered

Chosen Option : 3

Q.19 Study the given graph and answer the question that follows.

The graph presents smartphones (in lakh) sold by a company during the years 1999 to 2005.



What was the approximate percentage increase in the smartphone sales of the company from 2002 to 2003?

- Ans**
- 1. 44%
 - 2. 39%
 - 3. 48%
 - 4. 42%

Question ID : 7518978092

Option 1 ID : 75189732366

Option 2 ID : 75189732368

Option 3 ID : 75189732365

Option 4 ID : 75189732367

Status : Answered

Chosen Option : 1

Q.20 A man is 4 times as old his son. After 6 years, the man's age will be three times that of his son. The sum of their present ages is:

- Ans**
- 1. 90 years
 - 2. 60 years
 - 3. 70 years
 - 4. 80 years

Question ID : 7518978749

Option 1 ID : 75189734993

Option 2 ID : 75189734996

Option 3 ID : 75189734995

Option 4 ID : 75189734994

Status : Answered

Chosen Option : 2

Q.21 What is the normal systolic and diastolic pressure in humans?

- Ans**
- 1. 130 mm of Hg / 80 mm of Hg
 - 2. 120 mm of Hg / 90 mm of Hg
 - 3. 130 mm of Hg / 90 mm of Hg
 - 4. 120 mm of Hg / 80 mm of Hg

Question ID : 7518974592

Option 1 ID : 75189718365

Option 2 ID : 75189718367

Option 3 ID : 75189718366

Option 4 ID : 75189718368

Status : Answered

Chosen Option : 4

Q.22 A started a business with a capital of ₹4,50,000. After 3 months, B joined him with a certain amount of capital. At the end of a year of A's starting the business, the profit was shared in the ratio 3 : 2. How much (in ₹) did B invest?

- Ans**
- 1. 3,20,000
 - 2. 4,20,000
 - 3. 3,60,000
 - 4. 4,00,000

Question ID : 7518978365

Option 1 ID : 75189733457

Option 2 ID : 75189733460

Option 3 ID : 75189733458

Option 4 ID : 75189733459

Status : Answered

Chosen Option : 4

Q.23 In this question, a group of numbers/symbols is coded using letters as per the table given below and the conditions which follow. The correct combination of codes following the conditions is your answer.

Number/Symbol	4	5	9	#	\$	%	6
Codes	S	D	M	U	T	L	A

Conditions:

- (i) If the first element is an even number and the last element is an odd number, the codes for these two (the first and the last elements) are to be interchanged.
- (ii) If the second element is an even number and the fifth element is a symbol, the codes for these two (the second and the fifth elements) are to be interchanged.
- (iii) If the fourth element is a number and the sixth element is a symbol, both these elements (the fourth and the sixth elements) are to be coded as G.

Question: 4 5 \$ 9 4 % # 6

- Ans**
- ✓ 1. S D T G S G U A
 - ✗ 2. A D T G S G U S
 - ✗ 3. S D T M L G U A
 - ✗ 4. S S T G D G U A

Question ID : 7518975250
Option 1 ID : 75189720998
Option 2 ID : 75189720997
Option 3 ID : 75189721000
Option 4 ID : 75189720999

Status : Answered

Chosen Option : 1

Q.24 During the British rule in India, about how much per cent of the country's population lived mostly in villages and derived their livelihood directly or indirectly from agriculture?

- Ans**
- ✗ 1. 55%
 - ✗ 2. 75%
 - ✓ 3. 85%
 - ✗ 4. 65%

Question ID : 7518979413
Option 1 ID : 75189737652
Option 2 ID : 75189737650
Option 3 ID : 75189737649
Option 4 ID : 75189737651

Status : Answered

Chosen Option : 2

Q.25 The total surface area of a cube whose main diagonal length is $16\sqrt{3}$ cm is:

- Ans
- 1. 1764 cm^2
 - 2. 1868 cm^2
 - 3. 1854 cm^2
 - 4. 1536 cm^2

Question ID : 7518979330
Option 1 ID : 75189737317
Option 2 ID : 75189737319
Option 3 ID : 75189737318
Option 4 ID : 75189737320
Status : Answered
Chosen Option : 4

Q.26 The compound interest earned in 1 year on ₹40,000 at the rate of 40% per annum, compounded quarterly, is:

- Ans
- 1. ₹18,564
 - 2. ₹18,264
 - 3. ₹28,564
 - 4. ₹28,264

Question ID : 7518979244
Option 1 ID : 75189736974
Option 2 ID : 75189736975
Option 3 ID : 75189736973
Option 4 ID : 75189736976
Status : Answered
Chosen Option : 1

Q.27 If $x+y = 8$, product of x and y is 15, then the value of $x^4 + y^4$ is:

- Ans
- 1. 806
 - 2. 906
 - 3. 606
 - 4. 706

Question ID : 7518978732
Option 1 ID : 75189734926
Option 2 ID : 75189734925
Option 3 ID : 75189734928
Option 4 ID : 75189734927
Status : Answered
Chosen Option : 3

Q.28 Which language institution gives away the Bhasha Bharti Samman award in India?

Ans 1. Central Institute of Indian Languages

2. Rashtriya Sanskrit Sansthan

3. Kendriya Hindi Sansthan

4. Central Hindi Directorate

Question ID : 7518979386

Option 1 ID : 75189737544

Option 2 ID : 75189737542

Option 3 ID : 75189737543

Option 4 ID : 75189737541

Status : Answered

Chosen Option : 1

Q.29 Among six friends, A, B, C, D, E and F, each with a different height, B is taller than D but shorter than E. C is shorter than E. A is taller than F. D and E are shorter than C and A, respectively. E is shorter than A and F. Who among the six friends is the tallest?

Ans 1. A

2. E

3. C

4. F

Question ID : 7518974966

Option 1 ID : 75189719864

Option 2 ID : 75189719862

Option 3 ID : 75189719863

Option 4 ID : 75189719861

Status : Answered

Chosen Option : 1

Q.30 Select the correct statement.

Ans 1.

Slope of the consumption function is indicated by APC, and not MPC.

2. MPC multiplied by MPS equals 1.

3. Investment multiplier is positively related to MPC.

4. Investment multiplier is zero when MPS is zero.

Question ID : 7518976826

Option 1 ID : 75189727301

Option 2 ID : 75189727302

Option 3 ID : 75189727303

Option 4 ID : 75189727304

Status : Answered

Chosen Option : 3

Q.31 Amongst six friends P, Q, R, S, T and U, each has a different height. T is taller than only two other friends. R is shorter than only one friend. P is shorter than T but taller than S. Q is shorter than U. Who is the third tallest among all the friends?

- Ans**
- 1. Q
 - 2. R
 - 3. T
 - 4. U

Question ID : 7518979130
Option 1 ID : 75189736519
Option 2 ID : 75189736520
Option 3 ID : 75189736517
Option 4 ID : 75189736518
Status : Answered
Chosen Option : 1

Q.32 According to the Union Budget 2022, the overall workforce participation rate in India is _____.

- Ans**
- 1. 21.2%
 - 2. 20.3%
 - 3. 19.1%
 - 4. 22.6%

Question ID : 7518976541
Option 1 ID : 75189726163
Option 2 ID : 75189726162
Option 3 ID : 75189726161
Option 4 ID : 75189726164
Status : Answered
Chosen Option : 2

Q.33 The total numbers of covalent bond in propane are _____.

- Ans**
- 1. 10
 - 2. 7
 - 3. 12
 - 4. 8

Question ID : 7518973543
Option 1 ID : 75189714171
Option 2 ID : 75189714170
Option 3 ID : 75189714172
Option 4 ID : 75189714169
Status : Answered
Chosen Option : 4

Q.34 Read the given statements and conclusions carefully. Assuming that the information given in the statements is true, even if it appears to be at variance with commonly known facts, decide which of the given conclusions logically follow(s) from the statements.

Statements:

Some mats are figs.

All figs are clips.

No clip is a stand.

Conclusions:

I. All mats being stands is a possibility.

II. Some clips are mats.

- Ans**
- 1. Both conclusions I and II follow
 - 2. Only conclusion II follows
 - 3. Only conclusion I follows
 - 4. Neither conclusion I nor II follows

Question ID : 7518977315

Option 1 ID : 75189729257

Option 2 ID : 75189729258

Option 3 ID : 75189729259

Option 4 ID : 75189729260

Status : Answered

Chosen Option : 2

Q.35 The HCF of $(x^4 - y^4)$, $(x^8 - y^8)$ and $(x^2 - y^2)$ is:

- Ans**
- 1. $(x - y)(x + y)$
 - 2. $(x - y)(x + y)(x - y)(x + y)$
 - 3. $(x - y)(x + y)(x + y)$
 - 4. $(x + y)(x + y)$

Question ID : 7518978648

Option 1 ID : 75189734589

Option 2 ID : 75189734592

Option 3 ID : 75189734591

Option 4 ID : 75189734590

Status : Answered

Chosen Option : 1

Q.36

Name the state that became the first state to introduce carbon-neutral farming methods, in March 2022?

Ans

1. Jharkhand

2. Tamil Nadu

3. Assam

4. Kerala

Question ID : 7518973874

Option 1 ID : 75189715496

Option 2 ID : 75189715494

Option 3 ID : 75189715495

Option 4 ID : 75189715493

Status : Answered

Chosen Option : 4

Q.37

The average sale of cars by a dealer per day in the month of March, other than on Saturdays and Sundays, is 125. The average sale of cars per day on Sundays is 150. What is the average sale of cars per day on Saturdays, if the first Saturday is on the 3rd of March and average sale of cars per day for the whole month is 130?

Ans

1. 140

2. 136

3. 132

4. 138

Question ID : 7518978410

Option 1 ID : 75189733637

Option 2 ID : 75189733639

Option 3 ID : 75189733640

Option 4 ID : 75189733638

Status : Answered

Chosen Option : 2

Q.38

The value of $\sqrt{625} + \sqrt{0.25} - \sqrt{0.000025}$ is:

Ans

1. 25.405

2. 25.5

3. 25.395

4. 25.495

Question ID : 7518979208

Option 1 ID : 75189736832

Option 2 ID : 75189736831

Option 3 ID : 75189736829

Option 4 ID : 75189736830

Status : Answered

Chosen Option : 4

Q.39 One year ago, a man was 7 times as old as his daughter. Now his age is equal to the square of his daughter's age. If the daughter has already celebrated her first year birthday, then their present ages are:

- Ans**
- 1. 7 and 49
 - 2. 4 and 28
 - 3. 6 and 36
 - 4. 5 and 25

Question ID : **7518979318**
Option 1 ID : **75189737270**
Option 2 ID : **75189737272**
Option 3 ID : **75189737269**
Option 4 ID : **75189737271**
Status : **Answered**
Chosen Option : **3**

Q.40 Each vowel in the word 'EXACTLY' is changed to the letter following it in the English alphabetical order and each consonant is changed to the letter preceding it in the English alphabetical order. Which of the following letters will appear twice in the group of letters thus formed?

- Ans**
- 1. K
 - 2. B
 - 3. S
 - 4. W

Question ID : **7518974991**
Option 1 ID : **75189719964**
Option 2 ID : **75189719962**
Option 3 ID : **75189719963**
Option 4 ID : **75189719961**
Status : **Answered**
Chosen Option : **2**

Q.41 Gaganpreet started walking towards the north from his school. After walking for 6 metres he turned left and walked further 8 metres to reach his home. In which direction is his school from his home? (All turns are 90 degree turns only)

- Ans**
- 1. South-east
 - 2. South-west
 - 3. North-west
 - 4. North-east

Question ID : **7518978015**
Option 1 ID : **75189732058**
Option 2 ID : **75189732059**
Option 3 ID : **75189732057**
Option 4 ID : **75189732060**
Status : **Answered**
Chosen Option : **1**

Q.42 The value of $47 + \{7 + [61 - (21 \div 3)] \div 9\}$ is:

- Ans
- 1. 60
 - 2. 40
 - 3. 80
 - 4. 100

Question ID : 7518978613
Option 1 ID : 75189734451
Option 2 ID : 75189734452
Option 3 ID : 75189734450
Option 4 ID : 75189734449
Status : Answered
Chosen Option : 1

Q.43 Select the set in which the numbers are related in the same way as are the numbers of the following sets.

(NOTE : Operations should be performed on the whole numbers, without breaking down the numbers into its constituent digits. E.g. 13 – Operations on 13 such as adding / subtracting /multiplying etc. to 13 can be performed. Breaking down 13 into 1 and 3 and then performing mathematical operations on 1 and 3 is not allowed)

(20, 16, 8)

(13, 20, 23)

- Ans
- 1. (14, 18, 16)
 - 2. (32, 27, 18)
 - 3. (13, 16, 13)
 - 4. (19, 18, 21)

Question ID : 7518977737
Option 1 ID : 75189730947
Option 2 ID : 75189730945
Option 3 ID : 75189730946
Option 4 ID : 75189730948
Status : Answered
Chosen Option : 2

Q.44 The newer, younger deposits of the flood plains called _____ are renewed almost every year, and hence are fertile, thus being ideal for intensive agriculture.

- Ans
- 1. Bangar
 - 2. Khadar
 - 3. Bhabar
 - 4. Tarai

Question ID : 7518978909
Option 1 ID : 75189735633
Option 2 ID : 75189735634
Option 3 ID : 75189735635
Option 4 ID : 75189735636
Status : Answered
Chosen Option : 4

Q.45 In February 2022, which job portal powered by artificial intelligence was launched by IIT-Hyderabad to help people with disabilities to acquire relevant skills and find jobs?

- Ans
- 1. Yuvika
 - 2. Swarajability
 - 3. Glassdoor
 - 4. Sarthakindia

Question ID : 7518978828
Option 1 ID : 75189735311
Option 2 ID : 75189735310
Option 3 ID : 75189735309
Option 4 ID : 75189735312
Status : Answered
Chosen Option : 2

Q.46 There are 20 members in group A, 32 members in group B and 28 members in group C. All the members of these groups went to a restaurant. The average amount spent on each member of group A, B and C is ₹120, ₹125 and ₹100, respectively. The total average amount (in ₹) spent per member is:

- Ans
- 1. 115
 - 2. 118
 - 3. 116
 - 4. 112

Question ID : 7518978409
Option 1 ID : 75189733634
Option 2 ID : 75189733636
Option 3 ID : 75189733635
Option 4 ID : 75189733633
Status : Answered
Chosen Option : 1

Q.47 A 100 W bulb is connected to a 220 V source. The current through the bulb is:

- Ans
- 1. 1.1 A
 - 2. 0.25 A
 - 3. 0.45 A
 - 4. 2.2 A

Question ID : 7518976703
Option 1 ID : 75189726810
Option 2 ID : 75189726812
Option 3 ID : 75189726811
Option 4 ID : 75189726809
Status : Answered
Chosen Option : 3

Q.48 A man goes from place A to B at a speed of 18 km/h and returns from B to A at a speed of 30 km/h using the same route.
The average speed for the whole journey is:

Ans

1. $42\frac{1}{2}$ km/h

2. $52\frac{1}{2}$ km/h

3. $22\frac{1}{2}$ km/h

4. $32\frac{1}{2}$ km/h

Question ID : 7518978697

Option 1 ID : 75189734786

Option 2 ID : 75189734785

Option 3 ID : 75189734788

Option 4 ID : 75189734787

Status : Answered

Chosen Option : 3

Q.49 Select the set in which the numbers are related in the same way as are the numbers of the following sets.

(NOTE: Operations should be performed on the whole numbers, without breaking down the numbers into its constituent digits. E.g. 13 – Operations on 13 such as adding/subtracting/multiplying etc. to 13 can be performed. Breaking down 13 into 1 and 3 and then performing mathematical operations on 1 and 3 is not allowed.)

(13, 9, 5)

(14, 11, 8)

Ans

1. (18, 26, 36)

2. (22, 32, 24)

3. (22, 19, 16)

4. (14, 10, 12)

Question ID : 7518977402

Option 1 ID : 75189729605

Option 2 ID : 75189729608

Option 3 ID : 75189729606

Option 4 ID : 75189729607

Status : Answered

Chosen Option : 3

Q.50 Which of the following members of the homologous series of alkanes has the highest melting point?

- Ans
- 1. CH_4
 - 2. C_3H_8
 - 3. C_2H_6
 - 4. C_4H_{10}

Question ID : 7518973409
Option 1 ID : 75189713636
Option 2 ID : 75189713634
Option 3 ID : 75189713635
Option 4 ID : 75189713633

Status : Answered
Chosen Option : 1

Q.51 Rakesh and Raman have their houses in an eight-storeyed building. The lower most floor of the building is numbered as one and the top most floor is numbered as eight. Rakesh's house is just above Raman's floor. Every Day Raman has to go three floors down to drop his son to school which is nearby. On which floor Rakesh Lives?

- Ans
- 1. 3rd
 - 2. 5th
 - 3. 4th
 - 4. 6th

Question ID : 7518977896
Option 1 ID : 75189731584
Option 2 ID : 75189731582
Option 3 ID : 75189731581
Option 4 ID : 75189731583

Status : Answered
Chosen Option : 3

Q.52 Which of the following properties is NOT shown by bleaching powder?

- Ans
- 1. For bleaching cotton fibre
 - 2. Oxidising agent
 - 3. In water purification
 - 4. Reducing agent

Question ID : 7518973475
Option 1 ID : 75189713898
Option 2 ID : 75189713899
Option 3 ID : 75189713900
Option 4 ID : 75189713897

Status : Answered
Chosen Option : 2

Q.53 Acids that give rise to more H^+ ions are said to be _____, while those which gives less H^+ ions are said to be _____.

- Ans**
- 1. strong acid, strong base
 - 2. strong acid, weak acid
 - 3. weak acid, strong acid
 - 4. strong acid, weak base

Question ID : 7518973620
Option 1 ID : 75189714477
Option 2 ID : 75189714480
Option 3 ID : 75189714479
Option 4 ID : 75189714478
Status : Answered
Chosen Option : 2

Q.54 An area designated for wildlife in which they have unrestricted access to ecosystems and natural resources is called a _____.

- Ans**
- 1. protected area
 - 2. wildlife sanctuary
 - 3. biosphere reserve
 - 4. national park

Question ID : 7518974484
Option 1 ID : 75189717936
Option 2 ID : 75189717933
Option 3 ID : 75189717935
Option 4 ID : 75189717934
Status : Answered
Chosen Option : 2

Q.55 Which of the following is the birth place of the founder of Christianity?

- Ans**
- 1. Galilee
 - 2. Nazareth
 - 3. Bethlehem
 - 4. Haifa

Question ID : 7518977196
Option 1 ID : 75189728784
Option 2 ID : 75189728781
Option 3 ID : 75189728783
Option 4 ID : 75189728782
Status : Answered
Chosen Option : 3

Q.56 A device of 60 W is connected to a 12 V battery. The current in the device is:

- Ans
- 1. 0.1 A
 - 2. 2.5 A
 - 3. 0.2 A
 - 4. 5.0 A

Question ID : 7518976717
Option 1 ID : 75189726865
Option 2 ID : 75189726867
Option 3 ID : 75189726866
Option 4 ID : 75189726868
Status : Answered
Chosen Option : 4

Q.57 Which of the following will NOT affect the magnetic strength of an electromagnet?

- Ans
- 1. Length of the metallic core
 - 2. Current flowing through the coil
 - 3. Number of turns in the coil
 - 4. Direction of placement of the coil

Question ID : 7518978153
Option 1 ID : 75189732612
Option 2 ID : 75189732611
Option 3 ID : 75189732609
Option 4 ID : 75189732610
Status : Answered
Chosen Option : 2

Q.58 The double displacement reaction among the following is:

- Ans
- 1. $\text{Fe (s)} + \text{CuSO}_4 \text{ (aq)} \rightarrow \text{FeSO}_4 \text{ (aq)} + \text{Cu (s)}$
 - 2. $\text{Zn (s)} + \text{CuSO}_4 \text{ (aq)} \rightarrow \text{ZnSO}_4 \text{ (aq)} + \text{Cu (s)}$
 - 3. $\text{Pb (s)} + \text{CuCl}_2 \text{ (aq)} \rightarrow \text{PbCl}_2 \text{ (aq)} + \text{Cu (s)}$
 - 4. $\text{CuSO}_4 \text{ (aq)} + \text{H}_2\text{S (g)} \rightarrow \text{CuS (s)} + \text{H}_2\text{SO}_4 \text{ (aq)}$

Question ID : 7518973588
Option 1 ID : 75189714349
Option 2 ID : 75189714350
Option 3 ID : 75189714351
Option 4 ID : 75189714352
Status : Answered
Chosen Option : 3

Q.59 Genes control traits through the activity of:

- Ans
- 1. chromosomes
 - 2. gametes
 - 3. enzymes
 - 4. hormones

Question ID : 7518977843
Option 1 ID : 75189731371
Option 2 ID : 75189731372
Option 3 ID : 75189731369
Option 4 ID : 75189731370
Status : Answered
Chosen Option : 1

Q.60 Which two signs should be interchanged to make the following equation correct?

$$33 + 4 \times 21 + 3 - 17 = 122$$

- Ans
- 1. - and \times
 - 2. + and -
 - 3. + and \times
 - 4. + and -

Question ID : 7518978081
Option 1 ID : 75189732323
Option 2 ID : 75189732324
Option 3 ID : 75189732321
Option 4 ID : 75189732322
Status : Answered
Chosen Option : 3

Q.61 Which of the following options correctly describes the features of arteries?

- Ans
- 1.
Thick walls, no valves, blood flows under high pressure, carry blood to different parts of the body
 - 2.
Thin walls with valves, blood flows under high pressure, carry blood to different parts of the body
 - 3.
Thick walls, blood flows under low pressure, collect blood from different parts of the body
 - 4.
Thin walls with valves, blood flows under low pressure, collect blood from different parts of the body

Question ID : 7518974597
Option 1 ID : 75189718388
Option 2 ID : 75189718387
Option 3 ID : 75189718385
Option 4 ID : 75189718386
Status : Answered
Chosen Option : 2

Q.62 The value of

$$\frac{\sin^2 54^\circ + \sin^2 36^\circ}{\tan^2 40^\circ - \operatorname{cosec}^2 50^\circ}$$
 is:

- Ans
- 1. -1
 - 2. 2
 - 3. 0
 - 4. 1

Question ID : 7518978813
Option 1 ID : 75189735251
Option 2 ID : 75189735252
Option 3 ID : 75189735250
Option 4 ID : 75189735249
Status : Answered
Chosen Option : 1

Q.63 A $4\ \Omega$ resistor, A, is connected in series to a $6\ \Omega$ resistor, B, and a $2\ \text{V}$ battery. The potential drops across A and B are respectively _____.

- Ans
- 1. $0.6\ \text{V}$ and $1.4\ \text{V}$
 - 2. $1.2\ \text{V}$ and $0.8\ \text{V}$
 - 3. $1.4\ \text{V}$ and $0.6\ \text{V}$
 - 4. $0.8\ \text{V}$ and $1.2\ \text{V}$

Question ID : 7518976689
Option 1 ID : 75189726756
Option 2 ID : 75189726753
Option 3 ID : 75189726755
Option 4 ID : 75189726754
Status : Answered
Chosen Option : 3

Q.64 Indian Space Research Organization (ISRO) has successfully completed the ground test of the solid fuel-based booster stage (SS1) of its new SSLV at Satish Dhawan Space Centre (SDSC), Sriharikota at Andhra Pradesh in March 2022. What is the full form of the above mentioned SSLV?

- Ans
- 1. Small Satellite Launch Vehicle
 - 2. Solar Satellite Launch Vehicle
 - 3. Synchronized Satellite Launch Vehicle
 - 4. Systematic Satellite Launch Vehicle

Question ID : 7518979355
Option 1 ID : 75189737418
Option 2 ID : 75189737417
Option 3 ID : 75189737419
Option 4 ID : 75189737420
Status : Answered
Chosen Option : 3

Q.65 An object is placed on the principal axis of a concave lens, at a point between infinity and its optical centre O. Its image formed is _____.

- Ans**
- 1. real and diminished
 - 2. virtual and diminished
 - 3. virtual and enlarged
 - 4. real and enlarged

Question ID : **7518976626**
Option 1 ID : **75189726503**
Option 2 ID : **75189726504**
Option 3 ID : **75189726502**
Option 4 ID : **75189726501**
Status : **Answered**
Chosen Option : **2**

Q.66 _____ as a result of the 44th Constitutional Amendment to the Constitution of India.

- Ans**
- 1. The Preamble to the Constitution of India was amended to include the words 'socialist' and 'secular'
 - 2. Salaries of Judges of the High Courts and Supreme Court of India were revised
 - 3. Right to Property ceased to be a Fundamental Right
 - 4. Sikkim became the 22nd state of the India Union

Question ID : **7518978593**
Option 1 ID : **75189734371**
Option 2 ID : **75189734372**
Option 3 ID : **75189734369**
Option 4 ID : **75189734370**
Status : **Answered**
Chosen Option : **1**

Q.67 A solid cube with an edge of 10 cm is cast into cuboids of dimensions $4\text{ cm} \times 2\text{ cm} \times 1\text{ cm}$. The number of such cuboids that can be cast through it is:

- Ans**
- 1. 125
 - 2. 100
 - 3. 120
 - 4. 130

Question ID : **7518979329**
Option 1 ID : **75189737313**
Option 2 ID : **75189737316**
Option 3 ID : **75189737315**
Option 4 ID : **75189737314**
Status : **Answered**
Chosen Option : **1**

Q.68 Three statements are followed by three conclusions numbered I, II and III. Assuming the statements to be true, even if they do not conform to real world knowledge, decide which of the given conclusions/possibilities can be true on the basis of the statements.

Statements:

1. Some students are males.
2. Some males are sincere.
3. All sincere are honest.

Conclusions:

- I. Some honest are males.
- II. All males are students is a possibility.
- III. Some sincere are not students.

- Ans**
- 1. Only conclusion II is true
 - 2. Only conclusion III is true
 - 3. Only conclusion I and II are true
 - 4. Only conclusion I is true

Question ID : 7518978205
Option 1 ID : 75189732818
Option 2 ID : 75189732819
Option 3 ID : 75189732820
Option 4 ID : 75189732817

Status : Answered

Chosen Option : 3

Q.69 The third proportional to $(x^3 - y^3)$ and $(x - y)$ is:

- Ans**
- 1. $\frac{x - y}{x^2 + xy + y^2}$
 - 2. $\frac{(x - y)^2}{x^2 - xy + y^2}$
 - 3. $\frac{x - y}{x^2 - xy + y^2}$
 - 4. $\frac{(x - y)^2}{x^2 + xy + y^2}$

Question ID : 7518978668
Option 1 ID : 75189734671
Option 2 ID : 75189734670
Option 3 ID : 75189734669
Option 4 ID : 75189734672

Status : Answered

Chosen Option : 1

Q.70

Which ministry released a draft 'National Air Sports Policy (NASP)' for public feedback on January 2, 2022?

Ans

1. Ministry of Youth Affairs and Sports

2. Ministry of Home Affairs

3. Ministry of Civil Aviation

4. Ministry of External Affairs

Question ID : **7518973759**

Option 1 ID : **75189715034**

Option 2 ID : **75189715035**

Option 3 ID : **75189715033**

Option 4 ID : **75189715036**

Status : **Answered**

Chosen Option : **3**

Q.71

Which of the following gases is essential for all aerobic forms of life?

Ans

1. CO

2. O₂

3. CO₂

4. O₃

Question ID : **7518977862**

Option 1 ID : **75189731448**

Option 2 ID : **75189731446**

Option 3 ID : **75189731445**

Option 4 ID : **75189731447**

Status : **Answered**

Chosen Option : **2**

Q.72 If all the numbers given below are arranged in ascending order, the position of how many numbers will remain unchanged?

246, 247, 548, 845, 346, 578, 145

- Ans
- 1. 3
 - 2. 2
 - 3. 1
 - 4. 4

Question ID : 7518977993
Option 1 ID : 75189731971
Option 2 ID : 75189731970
Option 3 ID : 75189731969
Option 4 ID : 75189731972
Status : Answered
Chosen Option : 3

Q.73 Which of the following numbers will replace the question mark (?) in the given series?

15, 18, 27, 54, 135, ?

- Ans
- 1. 398
 - 2. 368
 - 3. 378
 - 4. 367

Question ID : 7518978304
Option 1 ID : 75189733216
Option 2 ID : 75189733214
Option 3 ID : 75189733215
Option 4 ID : 75189733213
Status : Answered
Chosen Option : 3

Q.74 The ratio of the present ages of a father and son is 7: 4. The product of their ages is 6300. The age of the son is:

- Ans
- 1. 70 years
 - 2. 50 years
 - 3. 80 years
 - 4. 60 years

Question ID : 7518978752
Option 1 ID : 75189735006
Option 2 ID : 75189735008
Option 3 ID : 75189735005
Option 4 ID : 75189735007
Status : Answered
Chosen Option : 4

Q.75 If $x^4 + \frac{1}{x^4} = 27$, then what is the value of $x^2 + \frac{1}{x^2}$?

Ans 1. 31

2. $\sqrt{29}$

3. $\sqrt{31}$

4. 29

Question ID : 7518976131

Option 1 ID : 75189724521

Option 2 ID : 75189724524

Option 3 ID : 75189724523

Option 4 ID : 75189724522

Status : Answered

Chosen Option : 2

Q.76 The term 'lithification' is related to which of the following geographic elements?

Ans 1. Rivers

2. Valleys

3. Seas

4. Rocks

Question ID : 7518973888

Option 1 ID : 75189715551

Option 2 ID : 75189715552

Option 3 ID : 75189715550

Option 4 ID : 75189715549

Status : Answered

Chosen Option : 4

Q.77 I, J, K, L, M, N and O are sitting along a circle facing at the centre and are playing cards. M is the immediate neighbour of I and L. J is second to the left of O. N is on the immediate right of I. What is the position of N?

- Ans**
- 1. 2nd to the right of K
 - 2. 2nd to the left of L
 - 3. To the immediate left of J
 - 4. 3rd to the right of O

Question ID : 7518978945
Option 1 ID : 75189735777
Option 2 ID : 75189735779
Option 3 ID : 75189735778
Option 4 ID : 75189735780
Status : Answered
Chosen Option : 3

Q.78 Consider the statements given below and identify the correct answer.

Statement I: The Modern Periodic Table has 18 vertical columns known as 'periods' and 7 horizontal rows known as 'groups'.

Statement II: Groups in the Periodic Table signify an identical outer shell electronic configuration

- Ans**
- 1. Statement I is correct, Statement II is incorrect.
 - 2. Both statements are incorrect.
 - 3. Both statements are correct.
 - 4. Statement II is correct, Statement I is incorrect.

Question ID : 7518973721
Option 1 ID : 75189714881
Option 2 ID : 75189714884
Option 3 ID : 75189714883
Option 4 ID : 75189714882
Status : Answered
Chosen Option : 3

Q.79 Given below is a statement followed by two possible underlying assumptions I and II. Read the information carefully and select the correct option.

Statement:

Extracts of plant C have been found useful in treating an earlier fatal disease. Although plant C, once imported, can be grown on any moist soil, most pharma companies in country Y are still choosing synthetic substitutes over using natural extracts.

Which of the following can be assumed by the given statement?

I. Unlike the case in all other countries, in Country Y, production of this synthetic substitute is substantially cheaper than growing Plant C.

II. The effect of a synthetic substitute is not drastically different from the plant extract.

- Ans**
- 1. Only I can be assumed
 - 2. Only II can be assumed
 - 3. Neither I nor II can be assumed
 - 4. Both I and II can be assumed

Question ID : 7518979082

Option 1 ID : 75189736325

Option 2 ID : 75189736326

Option 3 ID : 75189736328

Option 4 ID : 75189736327

Status : Answered

Chosen Option : 2

Q.80 Select the triad which follows the same pattern as that followed by the two triads given below. Both triads follow the same pattern.

AZ – CX – GT

XC – ZA – DW

- Ans**
- 1. DW – FU – JQ
 - 2. MN – OM – SH
 - 3. PK – RI – WD
 - 4. TH – VE – ZA

Question ID : 7518977709

Option 1 ID : 75189730835

Option 2 ID : 75189730834

Option 3 ID : 75189730836

Option 4 ID : 75189730833

Status : Answered

Chosen Option : 1

Q.81 What will come in place of the question mark (?) in the following equation, if '+' and '-' are interchanged and also '×' and '÷' are interchanged?

$$10 \div 5 + 144 \times 12 + 13 - 45 \times 9 + 12 = ?$$

- Ans**
- ✓ 1. 18
 - ✗ 2. 20
 - ✗ 3. 16
 - ✗ 4. 22

Question ID : **7518978335**
Option 1 ID : **75189733338**
Option 2 ID : **75189733339**
Option 3 ID : **75189733337**
Option 4 ID : **75189733340**
Status : **Answered**
Chosen Option : 1

Q.82 Satheesh starts from a bus-stand and travels 6 km towards the north. He then takes a right turn, travels 2 km, turns right and travels 11 km. He then takes a right turn and travels 5 km. He takes a final right turn, travels 3 km and stops at a junction. In which direction is the bus-stand with respect to the junction? (All turns are 90° turns only.)

- Ans**
- ✓ 1. North-east
 - ✗ 2. North
 - ✗ 3. South-west
 - ✗ 4. South

Question ID : **7518977375**
Option 1 ID : **75189729497**
Option 2 ID : **75189729498**
Option 3 ID : **75189729500**
Option 4 ID : **75189729499**
Status : **Answered**
Chosen Option : 1

Q.83 Which amendments of the Constitution of India aimed at strengthening local governments and ensuring an element of uniformity in their structure and functioning across the country?

- Ans**
- ✗ 1. 53rd and 54th
 - ✓ 2. 73rd and 74th
 - ✗ 3. 63rd and 64th
 - ✗ 4. 43rd and 44th

Question ID : **7518979449**
Option 1 ID : **75189737795**
Option 2 ID : **75189737793**
Option 3 ID : **75189737794**
Option 4 ID : **75189737796**
Status : **Answered**
Chosen Option : 3

Q.84 The HCF and LCM of two numbers are 24 and 456, respectively. If one number is 96, then the other number is:

- Ans
- 1. 192
 - 2. 112
 - 3. 114
 - 4. 216

Question ID : 7518978653
Option 1 ID : 75189734609
Option 2 ID : 75189734611
Option 3 ID : 75189734610
Option 4 ID : 75189734612
Status : Answered
Chosen Option : 3

Q.85 A decomposition reaction carried out by heating is called:

- Ans
- 1. thermal decomposition
 - 2. electrolysis
 - 3. photochemical decomposition
 - 4. exothermic reaction

Question ID : 7518978120
Option 1 ID : 75189732478
Option 2 ID : 75189732479
Option 3 ID : 75189732477
Option 4 ID : 75189732480
Status : Answered
Chosen Option : 1

Q.86 Eight coloured boxes are kept in an almirah having eight shelves. Only one box is kept on one shelf. The lower most shelf is numbered one and the uppermost shelf is numbered eight. There are only two boxes kept above the blue box. The brown box is kept between the black and the blue box. Six boxes are kept below the green box. The orange box is kept on an odd numbered shelf. The yellow box is kept just above the white box and is somewhere below the red box.

Which box is kept on the lowermost shelf?

- Ans
- 1. White
 - 2. Red
 - 3. Yellow
 - 4. Blue

Question ID : 7518977903
Option 1 ID : 75189731609
Option 2 ID : 75189731610
Option 3 ID : 75189731611
Option 4 ID : 75189731612
Status : Answered
Chosen Option : 1

Q.87 From the numbers 583, 459, 687, 754 and 853., which of the following will be the lowest number, if in each number, all the 8s and 5s are replaced with 2 and 1, respectively?

- Ans**
- 1. 459
 - 2. 687
 - 3. 583
 - 4. 853

Question ID : 7518979048
Option 1 ID : 75189736192
Option 2 ID : 75189736191
Option 3 ID : 75189736190
Option 4 ID : 75189736189
Status : Answered
Chosen Option : 3

Q.88 The National Commission for Protection of Child Rights (NCPCR) launched the SAMVEDNA helpline in 2021 to _____.

- Ans**
- 1. provide mental support to children affected by Covid-19
 - 2. provide guidance to students about career choices
 - 3. counsel children who witness domestic violence
 - 4. counsel children of sex workers

Question ID : 7518978503
Option 1 ID : 75189734009
Option 2 ID : 75189734012
Option 3 ID : 75189734010
Option 4 ID : 75189734011
Status : Answered
Chosen Option : 3

Q.89 The marked price of an article is ₹100. If the article is sold at a discount of 25%, then 25% profit is realised. The percentage loss or percentage profit made (approximately) if it is sold for ₹20 less than the marked price is:

- Ans**
- 1. 35% loss
 - 2. 25% profit
 - 3. $12\frac{1}{2}\%$ loss
 - 4. $33\frac{1}{3}\%$ profit

Question ID : 7518979257
Option 1 ID : 75189737028
Option 2 ID : 75189737026
Option 3 ID : 75189737027
Option 4 ID : 75189737025
Status : Answered
Chosen Option : 2

Q.90 Refer to the following number series and answer the question.

7 2 9 6 3 8 3 8 7 2 3 2 7 3 2 2 1 3 3 9 9 7 4 2 9 3 0 9

Find the sum of number of occurrences of 2s and number of occurrences of 3s in the given series.

- Ans**
- 1. 8
 - 2. 10
 - 3. 13
 - 4. 12

Question ID : 7518978258

Option 1 ID : 75189733029

Option 2 ID : 75189733030

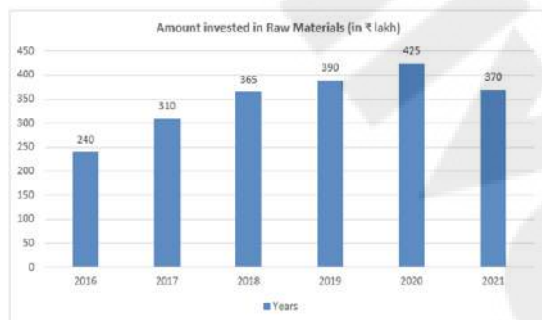
Option 3 ID : 75189733032

Option 4 ID : 75189733031

Status : Answered

Chosen Option : 3

Q.91 The following bar chart shows the amount invested by a company in raw material over the duration of six years. Study the bar chart and answer the question based on it.



The sum of amount invested in raw materials in 2016 and 2021 was what percentage of the sum of the amount invested in raw materials in the year 2018 and 2020?

- Ans**
- 1. 79.56%
 - 2. 79.98%
 - 3. 78.36%
 - 4. 77.22%

Question ID : 7518979061

Option 1 ID : 75189736243

Option 2 ID : 75189736244

Option 3 ID : 75189736242

Option 4 ID : 75189736241

Status : Answered

Chosen Option : 4

Q.92 Which of the following terms will replace the question mark (?) in the given series to make it logically complete?

FUR37, LAX43, RGD49, XMI55, ?

- Ans
- 1. PSD63
 - 2. PDS63
 - 3. DSP61
 - 4. DPS61

Question ID : 7518979135
Option 1 ID : 75189736540
Option 2 ID : 75189736537
Option 3 ID : 75189736539
Option 4 ID : 75189736538
Status : Answered
Chosen Option : 3

Q.93 12 unskilled and 14 skilled workers together complete a certain piece of work in 9 days. If each unskilled worker takes twice the time taken by a skilled worker to finish the work, in how many days will 12 skilled workers finish the same work?

- Ans
- 1. 10 days
 - 2. 15 days
 - 3. 18 days
 - 4. 12 days

Question ID : 7518979265
Option 1 ID : 75189737057
Option 2 ID : 75189737059
Option 3 ID : 75189737060
Option 4 ID : 75189737058
Status : Answered
Chosen Option : 2

Q.94 If in a code language, THINE is written as SGHMD and ISLAND is written as HRKZMC, how will DYNAMIC be written in that language?

- Ans
- 1. FGTRDVN
 - 2. JUHGTRD
 - 3. CXMZLHB
 - 4. EZNBMC I

Question ID : 7518979012
Option 1 ID : 75189736047
Option 2 ID : 75189736048
Option 3 ID : 75189736045
Option 4 ID : 75189736046
Status : Answered
Chosen Option : 3

Q.95 Who among the following freedom fighters has been honoured with the title of 'The Iron Man Of India'?

- Ans**
- 1. Ram Manohar Lohia
 - 2. Jawaharlal Nehru
 - 3. Vallabhbhai Patel
 - 4. Vithalbhai Patel

Question ID : 7518978847
Option 1 ID : 75189735387
Option 2 ID : 75189735385
Option 3 ID : 75189735388
Option 4 ID : 75189735386
Status : Answered
Chosen Option : 3

Q.96 In the year 2021, the sportspersons who won the most Arjuna Awards were associated with which sport?

- Ans**
- 1. Shooting
 - 2. Archery
 - 3. Hockey
 - 4. Cricket

Question ID : 7518976463
Option 1 ID : 75189725851
Option 2 ID : 75189725852
Option 3 ID : 75189725849
Option 4 ID : 75189725850
Status : Answered
Chosen Option : 4

Q.97 Which of the following festivals is also known as 'Vijayadashmi'?

- Ans**
- 1. Dussehra
 - 2. Pongal
 - 3. Diwali
 - 4. Onam

Question ID : 7518977473
Option 1 ID : 75189729892
Option 2 ID : 75189729889
Option 3 ID : 75189729891
Option 4 ID : 75189729890
Status : Answered
Chosen Option : 1

Q.98 Which of the following phenomena is NOT involved during the formation of a rainbow?

- Ans
- 1. Total internal reflection
 - 2. scattering
 - 3. dispersion
 - 4. refraction

Question ID : 7518975432
Option 1 ID : 75189721728
Option 2 ID : 75189721727
Option 3 ID : 75189721726
Option 4 ID : 75189721725
Status : Answered
Chosen Option : 3

Q.99 In plants, diffusion is mainly responsible for the process of transportation. However for transport of some substances, energy is needed. Which option shows the substances transported using energy from ATP?

- Ans
- 1. Water, minerals and food
 - 2. Food, amino acids and hormones
 - 3. Water and minerals
 - 4. Only amino acids

Question ID : 7518974544
Option 1 ID : 75189718175
Option 2 ID : 75189718176
Option 3 ID : 75189718173
Option 4 ID : 75189718174
Status : Answered
Chosen Option : 2

Q.100 Which of the following is NOT a component of the male reproductive part of flower?

- Ans
- 1. Pollen
 - 2. Anther
 - 3. Filament
 - 4. Style

Question ID : 7518977851
Option 1 ID : 75189731404
Option 2 ID : 75189731403
Option 3 ID : 75189731401
Option 4 ID : 75189731402
Status : Answered
Chosen Option : 4