

Combined Graduate Level Examination Tier II 2022

Roll Number	
Candidate Name	
Venue Name	iON Digital Zone iDZ 1 Sector 62
Exam Date	02/03/2023
Exam Time	9:00 AM - 12:00 PM
Subject	CGLE 2022 Tier II Paper I

Section : Mathematical Abilities

Q.1 There are three taps of diameter 2 cm, 3 cm and 4 cm, respectively. The ratio of the water flowing through them is equal to the ratio of the square of their diameters. The biggest tap can fill an empty tank alone in 81 min. If all the taps are opened simultaneously, then how long will the tank take (in min) to be filled?

Ans

✗ 1. $34\frac{20}{29}$

✗ 2. $64\frac{20}{29}$

✗ 3. $54\frac{20}{29}$

✓ 4. $44\frac{20}{29}$

Question ID : 264330122816

Status : Answered

Chosen Option : 4

Q.2 Two numbers are, respectively, 10% and 25% more than the third number. The ratio of the two numbers is:

Ans

✓ 1. 22 : 25

✗ 2. 19 : 25

✗ 3. 23 : 25

✗ 4. 18 : 25

Question ID : 26433056318

Status : Answered

Chosen Option : 1

Q.3 A, B and C did certain investments and the ratio of their time periods is 3 : 2 : 7 respectively. Ratio of the profits of A, B and C is 4 : 3 : 14 respectively. What is the ratio of the investments of A, B and C?

Ans

✗ 1. 1:3:4

✗ 2. 7:9:11

✓ 3. 8:9:12

✗ 4. 2:3:11

Question ID : 264330121715

Status : Answered

Chosen Option : 3

Q.4 A bike is sold for ₹87,500 by allowing a discount of 44% on its marked price. The marked price (in ₹) of the bike is:

- Ans
- ☒ 1. 1,56,100
 - ☒ 2. 1,58,225
 - ☒ 3. 1,56,250
 - ☒ 4. 1,55,500

Question ID : 264330121708

Status : Answered

Chosen Option : 3

Q.5 A, B, C are three points such that AB = 9 cm, BC = 11 cm and AC = 20 cm. The number of circles passing through points A, B, C is:

- Ans
- ☒ 1. 2
 - ☒ 2. 0
 - ☒ 3. 1
 - ☒ 4. 3

Question ID : 264330126437

Status : Answered

Chosen Option : 2

Q.6 A glass jar contains 6 white, 8 black, 4 red and 3 blue marbles. If a single marble is chosen at random from the jar, what is the probability that it is black or blue?

- Ans
- ☒ 1. $\frac{8}{21}$
 - ☒ 2. $\frac{11}{21}$
 - ☒ 3. $\frac{5}{21}$
 - ☒ 4. $\frac{1}{7}$

Question ID : 264330121737

Status : Answered

Chosen Option : 2

Q.7 Find the mode for the given distribution (rounded off to two decimal places).

Class Interval	5 – 10	10 – 15	15 – 20	20 – 25	25 – 30	30 – 35
Frequency	8	7	6	9	11	10

- Ans
- ☐ 1. 35.25
 - ☐ 2. 40.25
 - ☐ 3. 30.33
 - ☒ 4. 28.33

Question ID : 264330121734
Status : Not Answered
Chosen Option : --

Q.8 If interest be compounded half-yearly, then find the compound interest on ₹8,000 at the rate of 20% per annum for 1 year.

- Ans
- ☐ 1. ₹1,675
 - ☐ 2. ₹1,690
 - ☐ 3. ₹1,685
 - ☒ 4. ₹1,680

Question ID : 264330126383
Status : Answered
Chosen Option : 4

Q.9 A basket contains 350 eggs. If 12% of the eggs are rotten, how many eggs are good enough to be sold?

- Ans
- ☐ 1. 408
 - ☐ 2. 310
 - ☒ 3. 308
 - ☐ 4. 410

Question ID : 26433066357
Status : Answered
Chosen Option : 3

Q.10 A circle touches all four sides of a quadrilateral ABCD. If AB = 18 cm, BC = 21 cm and AD = 15 cm, then length CD is:

- Ans
- ☐ 1. 16 cm
 - ☐ 2. 14 cm
 - ☐ 3. 12 cm
 - ☒ 4. 18 cm

Question ID : 264330121661
Status : Answered
Chosen Option : 3

Q.11 What is the volume of the largest sphere that can be carved out of a wooden cube of sides 21 cm? ($\pi = \frac{22}{7}$)

- Ans
- ☐ 1. 3851 cm³
 - ☐ 2. 6858 cm³
 - ☒ 3. 4851 cm³
 - ☐ 4. 5821 cm³

Question ID : 264330123009
Status : Answered
Chosen Option : 3

Q.12 Find the value of the given expression.

$$\sqrt{8 + \sqrt{1681}}$$

- Ans
- ☐ 1. 5
 - ☐ 2. 6
 - ☐ 3. 4
 - ☒ 4. 7

Question ID : 264330121642
Status : Answered
Chosen Option : 4

Q.13 Find the value of given expression.
 $30 - [40 - \{56 - (25 - 13 - 12)\}]$

- Ans
- ☐ 1. 38
 - ☐ 2. 22
 - ☐ 3. 14
 - ☒ 4. 46

Question ID : 264330122828
Status : Answered
Chosen Option : 4

Q.14 The ratio of the incomes of two employees is 7 : 4, and the ratio of their expenditures is 3 : 1. If each of them manages to save ₹4,800 per month, find the sum of their monthly incomes (in ₹).

- Ans
- ☒ 1. 21120
 - ☐ 2. 20120
 - ☐ 3. 21150
 - ☐ 4. 18150

Question ID : 264330121745
Status : Answered
Chosen Option : 1

Q.15 If radius of a sphere is decreased by 48%, then by what percent does its surface area decrease?

- Ans
- ☐ 1. 82.91%
 - ☒ 2. 72.96%
 - ☐ 3. 78.98%
 - ☐ 4. 86.26%

Question ID : 264330121658
Status : Answered
Chosen Option : 2

Q.16 The product of the two numbers is 1500 and their HCF is 10. The number of such possible pairs is/are:

- Ans
- ☐ 1. 1
 - ☐ 2. 3
 - ☐ 3. 4
 - ☒ 4. 2

Question ID : 26433090276
Status : Answered
Chosen Option : 4

Q.17 A man buys a machine for Rs.5,000. After one year, he sells it for Rs.6000. After two years, again he buys the same machine at Rs.8,000 and sells it for Rs.10,000. Find his overall profit percentage for both the transactions.

- Ans
- ☐ 1. 20.23%
 - ☒ 2. 23.08%
 - ☐ 3. 18.75%
 - ☐ 4. 15.23%

Question ID : 26433058403
Status : Answered
Chosen Option : 2

Q.18 Evaluate the following.
 $\sin 25^\circ \sin 65^\circ - \cos 25^\circ \cos 65^\circ$.

- Ans
- ☐ 1. 4
 - ☐ 2. 1
 - ☒ 3. 0
 - ☐ 4. 40

Question ID : 264330126427
Status : Answered
Chosen Option : 3

Q.19 In ΔPQR , $PQ=QR$ and O is an interior point of ΔPQR such that $\angle OPR = \angle ORP$.

Consider the following statements:

(i) ΔPOR is an isosceles triangle.

(ii) O is the centroid of ΔPQR .

(iii) ΔPQO is congruent to ΔRQO .

Which of the above statements are correct?

- Ans
- ☐ 1. Only (i) and (ii)
 - ☒ 2. Only (i) and (iii)
 - ☐ 3. Only (ii) and (iii)
 - ☐ 4. Only (ii)

Question ID : 264330121758

Status : Answered

Chosen Option : 2

Q.20 A man can row 10 km/h in still water. When the river is running at a speed of 4.5 km/h, then it takes him 2 h to row to a place and comes back to the initial point . How far is the place (in km) (rounded off to two decimal places)?

- Ans
- ☐ 1. 5.50
 - ☐ 2. 8.98
 - ☒ 3. 7.98
 - ☐ 4. 6.25

Question ID : 264330121725

Status : Answered

Chosen Option : 3

Q.21 Find the average of the cubes of the first five natural numbers.

- Ans
- ☐ 1. 35
 - ☐ 2. 40
 - ☒ 3. 45
 - ☐ 4. 50

Question ID : 26433073075

Status : Answered

Chosen Option : 3

Q.22 For what value of m will the system of equations $17x+my+102=0$ and $23x+299y+138=0$ have infinite number of solutions?

- Ans
- ☒ 1. 221
 - ☐ 2. 223
 - ☐ 3. 220
 - ☐ 4. 219

Question ID : 264330121748

Status : Answered

Chosen Option : 1

Q.23 A rectangular park is 120 m long and 104 m wide. A 1-m wide path runs along the boundary of the park, remaining completely inside the park area. Thus, the outside edges of the path run along the boundary wall of the park. The inside edges of the path are marked with a white line of negligible thickness. If it costs ₹2.50 to mark each metre with the white line, then how much would it cost (in ₹) to fully mark the inside edges of the path?

- Ans
- ☐ 1. 1090
 - ☐ 2. 1080
 - ☐ 3. 1120
 - ☒ 4. 1100

Question ID : 264330122873

Status : Answered

Chosen Option : 4

Q.24 40 litres of milk are kept in a container. 4 litres of milk were removed from this container and replaced with water. This procedure was performed two more times. How much milk does the container now hold?

- Ans
- ☐ 1. 30 litres
 - ☐ 2. 34.23 litres
 - ☒ 3. 29.16 litres
 - ☐ 4. 32 litres

Question ID : 26433057120

Status : Answered

Chosen Option : 4

Q.25 The difference of simple interest from two banks on ₹8,000 in 3 years is ₹800. If the rate of interest per annum in two banks are R_1 and R_2 , then what is the value of $R_1 - R_2$? (Where $R_1 > R_2$)

- Ans
- ☐ 1. $5\frac{1}{3}\%$
 - ☒ 2. $3\frac{1}{3}\%$
 - ☐ 3. $1\frac{1}{3}\%$
 - ☐ 4. $2\frac{1}{3}\%$

Question ID : 264330121648

Status : Answered

Chosen Option : 2

Q.26 If $\tan(A + B) = \sqrt{3}$ and $\tan(A - B) = \frac{1}{\sqrt{3}}$; $0^\circ < (A + B) < 90^\circ$; $A > B$, then the values of A and B are _____ respectively.

- Ans**
- ☒ 1. 45° and 15°
 - ☐ 2. 15° and 45°
 - ☐ 3. 30° and 30°
 - ☐ 4. 60° and 30°

Question ID : **264330126431**
Status : **Answered**
Chosen Option : **1**

Q.27 Two ships are on the opposite of a light house such that all three of them are collinear. The angles of depression of the two ships from the top of the light house are 30° and 60° . If the ships are $230\sqrt{3}$ m apart, then find the height of the light house (in m).

- Ans**
- ☐ 1. 175.4
 - ☐ 2. 165.2
 - ☒ 3. 172.5
 - ☐ 4. 180.5

Question ID : **264330122824**
Status : **Answered**
Chosen Option : **3**

Q.28 The arithmetic mean of the following data is _____.
23, 17, 20, 19, 21

- Ans**
- ☒ 1. 20
 - ☐ 2. 19
 - ☐ 3. 23
 - ☐ 4. 21

Question ID : **264330126395**
Status : **Answered**
Chosen Option : **1**

Q.29 The number 5769116 is divisible by which of the following numbers?

- Ans**
- ☒ 1. 4
 - ☐ 2. 5
 - ☐ 3. 12
 - ☐ 4. 8

Question ID : **264330126419**
Status : **Answered**
Chosen Option : **1**

Q.30 If $\frac{1}{x} + x = 4$, then find $\frac{1}{x^2} + x^2$.

- Ans ☒ 1. 14
☐ 2. 5
☐ 3. 7
☐ 4. 15

Question ID : 26433074357
Status : Answered
Chosen Option : 1

Section : Reasoning and General Intelligence

Q.1 'A # B' means 'A is the brother of B'.
'A @ B' means 'A is the daughter of B'.
'A & B' means 'A is the husband of B'.
'A % B' means 'A is the wife of B'.
If D @ N @ H & Y @ F % V, then how is N related to F?

- Ans ☐ 1. Son's wife
☐ 2. Daughter
☒ 3. Daughter's daughter
☐ 4. Sister's daughter

Question ID : 264330126287
Status : Answered
Chosen Option : 3

Q.2 The second number in the given number-pairs is obtained by performing certain mathematical operation(s) on the first number. The same operation(s) is/are followed in all the number-pairs except one. Find that odd number-pair.

- Ans ☐ 1. 5 : 128
☐ 2. 3 : 30
☒ 3. 7 : 352
☐ 4. 1 : 4

Question ID : 264330126254
Status : Answered
Chosen Option : 3

Q.3 Six friends A, B, C, D, E and F are standing in a circle facing the centre. B is between F and C, A is between E and D, and F is to the immediate left of D. Who is between A and F?

- Ans ☒ 1. D
☐ 2. E
☐ 3. C
☐ 4. B

Question ID : 26433081996
Status : Answered
Chosen Option : 2

Q.4 Select the correct mirror image of the given combination when the mirror is placed at 'PQ' as shown below.

mS5aT7raKr

- Ans
- ☐ 1. mS5aT7raKr
 - ☒ 2. ɹɹʇɹʇTʇaɹKɹ
 - ☐ 3. ɹɹʇɹʇTʇaɹKɹ
 - ☐ 4. ɹɹʇɹʇTʇaɹKɹ

Question ID : 264330126296

Status : Answered

Chosen Option : 2

Q.5 In this question, a statement is followed by two courses of action, numbered I and II. You must assume everything in the statement to be true and on the basis of the information given in the statement, decide which course of action/s logically follows for pursuing.

Statement: A large number of the people of the city are diagnosed to be suffering from Malaria disease.

Course of Action:

I. The city municipal authorities should take immediate steps to carry out extensive fumigation in the city.

II. The people in the area should be advised to take steps to avoid mosquito bites.

- Ans
- ☒ 1. Both I and II follow
 - ☐ 2. Only II follows
 - ☐ 3. Only I follows
 - ☐ 4. Neither I nor II follows

Question ID : 264330123207

Status : Not Attempted and Marked For Review

Chosen Option : --

Q.6 Given below is a question followed by two statements I and II. Read both the statements carefully to decide which one of them is sufficient to answer the question.

Six people - K, M, N, P, Q and R are sitting around a circular table facing the centre.

Who sits to the immediate right of K?

(I) K sits third to the left of M. Only one person sits between K and N. R sits to the immediate left of N.

(II) K sits second to the right of Q. Only two people sit between K and M. P sits second to the left of R.

- Ans
- ☐ 1. Data in statement I alone is sufficient to answer the question while data in statement II is not.
 - ☒ 2. Either data in statement I or statement II is sufficient to answer the question.
 - ☐ 3. Data in statements I and II together are sufficient to answer the question.
 - ☐ 4. Data in statement II alone is sufficient to answer the question while data in statement I is not.

Question ID : 264330121435

Status : Answered

Chosen Option : 1

Q.7 If + means \times , \times means \div , and \div means +, what will be the value of the following expression?
 $5 \div 5 + 5 - 10 \times 10 = ?$

- Ans
- ☐ 1. 15
 - ☐ 2. 4
 - ☒ 3. 5
 - ☐ 4. 10

Question ID : 26433068611
Status : Answered
Chosen Option : 3

Q.8 A question is given, followed by two statements numbered (I) and (II). You have to decide whether the data provided in the statements is sufficient to answer the question. Read both the statements and select the appropriate answer.

Question: Six people sit in two parallel rows. In Row 1 - J, K and L sit facing towards north, and in Row 2 - F, G and H sit facing towards south. Each person in a row faces a person in the other row. Who faces G?

Statements:

(I) H faces K; L faces an immediate neighbour of H.

(II) G sits at one of the extreme ends of the row; J sits to the immediate left of L.

- Ans
- ☒ 1. Data in statements I and II together is sufficient to answer the question
 - ☐ 2. Data in statement II alone is sufficient to answer the question while data in statement I is not
 - ☐ 3. Data in statement I alone is sufficient to answer the question while data in statement II is not
 - ☐ 4. Data in either statement I alone or statement II alone is sufficient to answer the question

Question ID : 264330121195
Status : Answered
Chosen Option : 1

Q.9 Select the number from among the given options that can replace the question mark (?) in the following series.
58, 179, ?, 492, 688

- Ans
- ☐ 1. 300
 - ☐ 2. 269
 - ☐ 3. 313
 - ☒ 4. 323

Question ID : 26433074538
Status : Not Answered
Chosen Option : --

Q.10 Three of the following words are alike in some manner and hence form a group. Which word does NOT belong to that group? (The words must be considered as meaningful English words and must not be grouped based on the number of letters/number of consonants/vowels in the word)

- Ans** ☒ 1. Excel
☒ 2. Keynote
☒ 3. PowerPoint
☒ 4. Word

Question ID : 26433065633
Status : Answered
Chosen Option : 2

Q.11 In a certain code language, 'PAINT' is written as '80' and 'DROP' is written as '59'. How will 'MARKET' be written in that language?

- Ans** ☒ 1. 100
☒ 2. 85
☒ 3. 95
☒ 4. 90

Question ID : 264330126266
Status : Not Attempted and Marked For Review
Chosen Option : --

Q.12 A number has been denoted to each of the given letters. Select the option from the following four possible arrangements of these numbers that forms a meaningful word.
E = 1, Z = 2, L = 3, P = 4, U = 5, Z = 6

- Ans** ☒ 1. 4,5,1,6,2,3
☒ 2. 6,1,4,3,5,2
☒ 3. 1,5,3,4,2,6
☒ 4. 4,5,6,2,3,1

Question ID : 264330121088
Status : Answered
Chosen Option : 4

Q.13 Select the figure from the options that can replace the question mark (?) and complete the pattern.



Ans

✓ 1.



✗ 2.



✗ 3.



✗ 4.



Question ID : 26433068218

Status : Answered

Chosen Option : 1

Q.14 Select the option that represents the letters that, when placed from left to right in the following blanks, will complete the letter-series.
Q W _ R T Q _ F R _ Q W _ _ T _ _ H R T

Ans

✗ 1. F W T G R Q X

✗ 2. E X T G R Q X

✓ 3. E W T G R Q W

✗ 4. E W T H S Q W

Question ID : 264330126276

Status : Answered

Chosen Option : 3

Q.15 Select the correct combination of mathematical signs to sequentially replace the * signs and balance the given equation.
 $21 * 3 * 36 * 2 * 23 = 68$

Ans

✗ 1. $\div - \times +$

✗ 2. $\div \times + -$

✗ 3. $+ \times - \div$

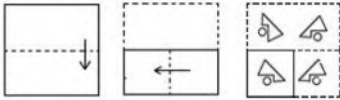
✓ 4. $\times - \div +$

Question ID : 26433068105

Status : Answered


Chosen Option : 4

Q.16 The sequence of folding a piece of paper and the manner in which the folded paper has been cut is shown below. Choose a figure which would most closely resemble the unfolded form of the paper.



Ans

✓ 1.



✗ 2.



✗ 3.



✗ 4.



Question ID : 264330126303

Status : Answered

Chosen Option : 1

Q.17 Which of the following letter-clusters should replace # and % so that the pattern and relationship followed between the letter-cluster pair on the left side of :: is the same as that on the right side of ::?

: DKR :: PCL : %

Ans ✗ 1. # = BNQ, % = NFM

✓ 2. # = FHT, % = NFJ

✗ 3. # = COQ, % = OGH

✗ 4. # = BNP, % = NFJ

Question ID : 264330121405

Status : Answered

Chosen Option : 4

Q.18 All 32 students in a class are standing in a row facing north. Akash is 12th from the right end while Priya is 18th from the left end. How many people are standing between Akash and Priya?

Ans ✓ 1. Two

✗ 2. Four

✗ 3. Three

✗ 4. Five

Question ID : 264330121142

Status : Answered

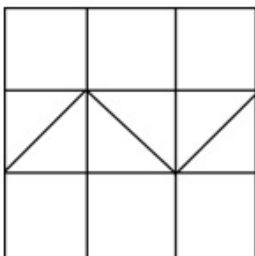
Chosen Option : 1

Q.19 Select the option in which the following figure is embedded. (Rotation is NOT allowed)

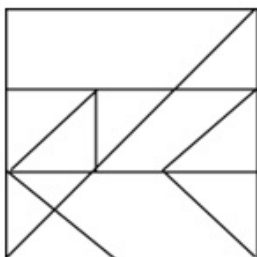


Ans

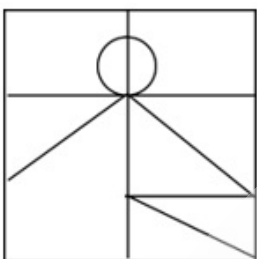
✓ 1.



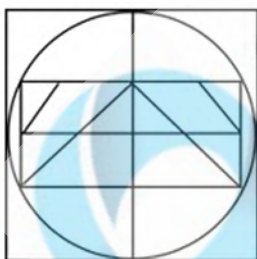
✗ 2.



✗ 3.



✗ 4.



Question ID : 264330121391

Status : Answered

Chosen Option : 1

Q.20 Three Statements are given followed by four conclusions numbered 1, 2, 3, and 4. Assuming the statements to be true, even if they seem to be at variance with commonly known facts, decide which of the conclusions logically does NOT follow(s) from the statements.

Statements:

All P are G.

Some G are B.

All B are C.

Conclusions:

1) All P being C is a possibility.

2) Some P are B.

3) Some C are G.

4) Some G are P.

Ans ☒ 1. Only 3 does not follow.

☒ 2. Only 4 does not follow.

☒ 3. Only 2 does not follow.

☒ 4. Only 1 does not follow.

Question ID : 26433069182

Status : Answered

Chosen Option : 3

Q.21 In this question, two statements I and II have been given. These statements may be independent causes or effects of independent causes or a common cause. One of the statements maybe the effect of the other statement. Read both statements and select the correct answer.

I. This year College X reduced the cut-off marks to 50 from 60 for the entrance exam.

II. In the last two years, the Students Union in College X has been actively negotiating with the college administration regarding the Quality of food and Health and Hygiene standards at the College Canteen.

Ans ☒ 1. II is the cause and I is its possible effect

☒ 2. I is the cause and II is its possible effect

☒ 3. Both I and II are effects of independent causes

☒ 4. Both I and II are independent causes

Question ID : 264330121453

Status : Answered

Chosen Option : 4

Q.22 'A # B' means 'A is the brother of B'.

'A @ B' means 'A is the daughter of B'.

'A & B' means 'A is the husband of B'.

'A % B' means 'A is the wife of B'.

If W % D # G @ B & M @ I, then how is D related to M?

Ans ☒ 1. Father's father

☒ 2. Father

☒ 3. Grandson

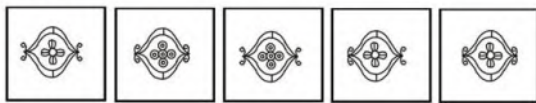
☒ 4. Son

Question ID : 264330126292

Status : Answered

Chosen Option : 4

Q.23 Out of the following five figures, four are alike in some manner and one differs from these in that manner. Select the odd figure.




Ans

✓ 1.



✗ 2.



✗ 3.



✗ 4.



Question ID : 264330128895

Status : Not Answered

Chosen Option : --

Q.24 Select the set in which the numbers are related in the same way as are the numbers of the following sets.

(NOTE : Operations should be performed on the whole numbers, without breaking down the numbers into its constituent digits. E.g. 13 – Operations on 13 such as adding /deleting /multiplying etc. to 13 can be performed. Breaking down 13 into 1 and 3 and then performing mathematical operations on 1 and 3 is NOT allowed)
(11, 33, 17), (18, 44, 21)

Ans ✗ 1. (12, 40, 18)

✗ 2. (7, 32, 9)

✓ 3. (16, 43, 22)

✗ 4. (15, 34, 19)

Question ID : 264330126247

Status : Not Answered

Chosen Option : --

Q.25 Out of the following five figures, four are alike in some manner and one differs from these in that manner. Select the odd figure.



Ans

✓ 1.



✗ 2.



✗ 3.



✗ 4.

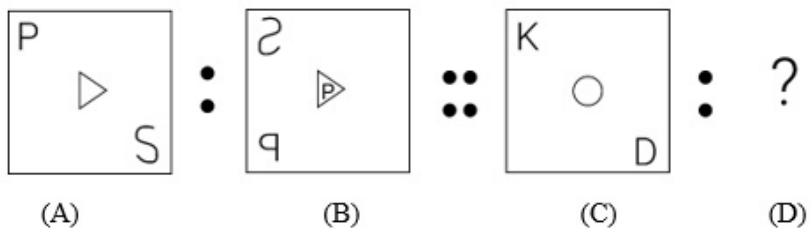


Question ID : 264330128889

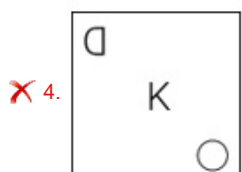
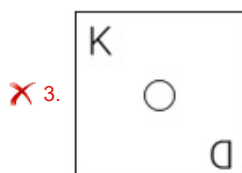
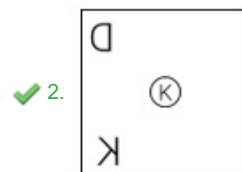
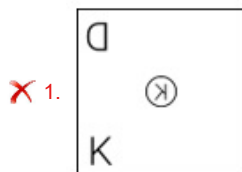
Status : Answered

Chosen Option : 1

Q.26 Figure A is related to B in a certain pattern. Following the same pattern, figure C is related to D. Study the pattern and select the figure which should be placed in place of D.



Ans



Question ID : 264330121471

Status : Answered

Chosen Option : 2

Q.27 In a certain language, the word CLOCK is written as 4 – 13 – 17 – 4 – 12. How will you write PHONE in the same language?

Ans ✗ 1. 17 – 10 – 16 – 15 – 6

✗ 2. 17 – 9 – 16 – 17 – 6

✓ 3. 17 – 9 – 17 – 15 – 6

✗ 4. 16 – 9 – 15 – 16 – 5

Question ID : 26433078842

Status : Answered

Chosen Option : 3

Q.28 In the following question, the statement is followed by two conclusions. Which of the two conclusions is/are true?

Statement: $M < K > I < J > H = G \leq F$

Conclusions: I. $H = F$

II. $J > G$

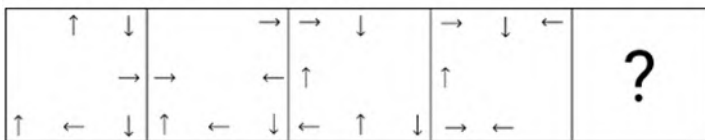
- Ans**
- ☒ 1. Only conclusion I is true
 - ☒ 2. Both conclusions I and II are true
 - ☒ 3. Only conclusion II is true
 - ☒ 4. Neither conclusion I nor II is true

Question ID : 26433057325

Status : Answered

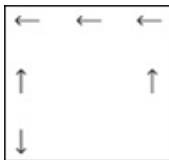
Chosen Option : 2

Q.29 Select the figure from among the given options that can replace the question mark (?) in the following series.

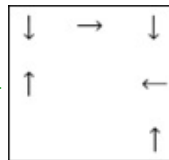


Ans

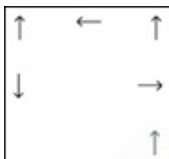
☒ 1.



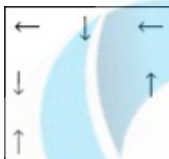
☒ 2.



☒ 3.



☒ 4.



Question ID : 264330101258

Status : Answered

Chosen Option : 2

Q.30 Directions: A statement is given followed by two inferences I and II. You have to consider the statement to be true even if it seems to be at variance with commonly known facts. You have to decide which of the given inferences, if any, follow from the given statement.

Statement:

National Expressway-A is the widest expressway and is used by few people. When people find an empty and wide road, people drive at high speed, which leads to accidents.

Inference:

I. All accidents happen due to over speeding.

II. High speed increases the risk of accident.

- Ans**
- ☒ 1. If only I follows
 - ☒ 2. If both I and II follow
 - ☒ 3. If only II follows
 - ☒ 4. If neither I nor II follows

Question ID : 264330128900

Status : Answered

Chosen Option : 2

Section : English Language and Comprehension

Q.1 Select the most appropriate **ANTONYM** of the underlined word.

The colossal building stood amidst the ruins bearing signs of Victorian architecture.

- Ans**
- ☒ 1. Enormous
 - ☒ 2. Extraordinary
 - ☒ 3. Quaint
 - ☒ 4. Tiny

Question ID : 26433070537

Status : Answered

Chosen Option : 4

Q.2 Select the option that can be used as a one-word substitute for the given group of words.

Willful destruction

- Ans**
- ☒ 1. Disaster
 - ☒ 2. Combustion
 - ☒ 3. Calamity
 - ☒ 4. Sabotage

Question ID : 26433072320

Status : Answered

Chosen Option : 2

Q.3 Sentences of a paragraph are given below in jumbled order. Arrange the sentences in the correct order to form a meaningful and coherent paragraph.

- A. Tigers are the largest members of the cat family. They are found in many parts of Asia.
B. They mostly live in dark forests and sleep during the day. They come out for hunting pigs and deer by night.
C. It is assumed that, probably, around 3,000 tigers live in the wild. This species looks spectacular and grand and they are very graceful in their movements.
D. It is almost impossible for us to see them against a jungle background, especially when they are standing still, because of their striped coats. Unlike, most cats, the tiger likes bathing very much.

Ans ☒ 1. ABCD
☒ 2. CDBA
☒ 3. ACBD
☒ 4. ADBC

Question ID : 26433070701
Status : Answered
Chosen Option : 1

Q.4 Select the most appropriate option to fill in the blank.
A good leader should be ready to _____ criticism.

Ans ☒ 1. settle
☒ 2. meet
☒ 3. face
☒ 4. carry

Question ID : 26433058502
Status : Answered
Chosen Option : 3

Q.5 Select the most appropriate meaning of the highlighted idiom.
The youth involved in the accident **escaped** by the skin of his teeth.

Ans ☒ 1. Barely managed to escape
☒ 2. Very arrogant
☒ 3. Always taking calculated decisions
☒ 4. Deficiency of funds

Question ID : 264330120744
Status : Answered
Chosen Option : 1

Q.6 Select the correct homonym from the given options to fill in the blank.
Which _____ does the minister take to reach the Assembly?

Ans ☒ 1. root
☒ 2. rot
☒ 3. route
☒ 4. riot

Question ID : 264330120788
Status : Answered
Chosen Option : 3

Q.7 For the four-sentence (S1 to S4) paragraph below, sentences S1 and S4 are given.
From the options P, Q, R and S select the appropriate sentences for S2 and S3,
respectively.

(S1) The men and women took their places after the initial mingling, and immediately a surge of conversation filled the room.

(S2)

(S3)

(S4) One or two of the women were actually bouncing up and down on the sofa cushions.

(P) So, the two parties had to lean forward, their elbows on their knees.

(Q) At the beginning they mingled awkwardly, clutching their drinks, and walking here and there.

(R) Several people made a last-minute dash to the bathroom before the conversation could start.

(S) The men's chairs were far enough away from the women's couches.

Ans ☒ 1. P, R

☒ 2. R, Q

☒ 3. Q, S

☒ 4. S, P

Question ID : 26433065209

Status : Answered

Chosen Option : 4

Q.8 The following sentence has been divided into parts. One of them may contain an error.
Select the part that contains the error from the given options. If you don't find any error, mark 'No error' as your answer.

He lived close to / the train station, / yet travelled by bus.

Ans ☒ 1. yet travelled by bus

☒ 2. No error

☒ 3. He lived close to

☒ 4. the train station

Question ID : 26433061471

Status : Answered

Chosen Option : 1

Q.9 Select the most appropriate option to fill in the blank.
Vishal is going to read the story _____.

Ans ☒ 1. load

☒ 2. allow

☒ 3. aloud

☒ 4. allowed

Question ID : 264330123032

Status : Answered

Chosen Option : 3

Q.10 The following sentence has been split into four segments. Identify the segment that contains a grammatical error.

My father give up / smoking when / I was twelve / years old.

Ans ☒ 1. My father give up

☐ 2. smoking when

☐ 3. I was twelve

☐ 4. years old

Question ID : 264330123923

Status : Answered

Chosen Option : 1

Q.11 Select the INCORRECTLY spelt word.

Ans ☐ 1. Descendant

☐ 2. Deceased

☐ 3. Decimate

☒ 4. Desedent

Question ID : 26433060474

Status : Answered

Chosen Option : 4

Q.12 Select the option that expresses the given sentence in reported speech.
Raghav said to Meera, "Are you upset with me?"

Ans ☐ 1. Raghav asked Meera if she was upset with her.

☒ 2. Raghav asked Meera if she was upset with him.

☐ 3. Raghav asked Meera if she was upset with me.

☐ 4. Raghav asked Meera why she was upset with him.

Question ID : 26433059501

Status : Answered

Chosen Option : 2

Q.13 Select the option that expresses the given sentence in active voice.
The task has been completed.

Ans ☒ 1. Someone has completed the task.

☐ 2. Someone has been completing the task.

☐ 3. Someone will be completing the task.

☐ 4. Someone completes the task.

Question ID : 264330123913

Status : Answered

Chosen Option : 1

Q.14 Select the option that expresses the given sentence in passive voice.
We can buy books online from Amazon.

- Ans
- ☒ 1. Books were to be bought online from Amazon.
 - ☒ 2. Books are bought online from Amazon.
 - ☒ 3. Books can be bought online from Amazon.
 - ☒ 4. Books could be bought online from Amazon.

Question ID : 26433059195
Status : Answered
Chosen Option : 3

Q.15 Select the most appropriate option that can substitute the underlined segment in the given sentence. If there is no need to substitute it, select 'No substitution required'.

Edward II is tragic than some other plays by the dramatist.

- Ans
- ☒ 1. as least tragic as
 - ☒ 2. No substitution required
 - ☒ 3. the most tragic
 - ☒ 4. less tragic than

Question ID : 26433058620
Status : Answered
Chosen Option : 1

Q.16 Sentences of a paragraph are given below in jumbled order. Arrange the sentences in the correct order to form a meaningful and coherent paragraph.

- a. Many fitness trainers encourage their clients to include these foods in their diet to build muscle.
- b. Power foods can be included in your everyday diet in a variety of ways.
- c. The secret to getting the most out of power foods is, of course, knowing how to cook them properly, buying seasonal produce and recognising your preferred flavour profile.
- d. Power foods are high in nutrients such as fibre, potassium and minerals.

- Ans
- ☒ 1. d, b, c, a
 - ☒ 2. d, a, b, c
 - ☒ 3. b, c, a, d
 - ☒ 4. a, d, b, c

Question ID : 264330123664
Status : Answered
Chosen Option : 1

Q.17 Select the most appropriate ANTONYM of the underlined word.

The new Principal of the school is stern, yet he understands the needs of his subordinates.

- Ans
- ☒ 1. Flippant
 - ☒ 2. Lenient
 - ☒ 3. Desolate
 - ☒ 4. Noxious

Question ID : 26433070532
Status : Answered
Chosen Option : 2

Q.18 Select the most appropriate option to fill in the blank.

The friends decided to play cards to _____ time while waiting for the cab.

- Ans ☒ 1. ignore
☒ 2. kill
☒ 3. move
☒ 4. ease

Question ID : 26433058504

Status : Answered

Chosen Option : 4

Q.19 Sentences of a paragraph are given below in jumbled order. Arrange the sentences in the correct order to form a meaningful and coherent paragraph.

- A) Healthy, strong trees act as carbon sinks, offsetting carbon and reducing the effects of climate change.
B) Trees help to clean the air we breathe. Through their leaves and bark, they absorb harmful pollutants and release clean oxygen for us to breathe.
C) Increasing levels of carbon dioxide caused by deforestation and fossil fuel combustion trap heat in the atmosphere.
D) In urban environments, trees absorb pollutant gases like nitrogen oxides, ozone, and carbon monoxide, and sweep up particles like dust and smoke.

- Ans ☒ 1. BDCA
☒ 2. DBAC
☒ 3. CDAB
☒ 4. ABCD

Question ID : 26433065239

Status : Answered

Chosen Option : 1

Q.20 Select the option that expresses the given sentence in reported speech.

Shikha said, "The heavy rain this week has spoiled all my travel plans."

- Ans ☒ 1. Shikha said that the heavy rain that week had spoiled all her travel plans.
☒ 2. Shikha told me that the heavy rain that week had spoiled all her travel plans.
☒ 3. Shikha said that the heavy rain that week has spoiled all her travel plans.
☒ 4. Shikha said that the heavy rain this week had spoiled all her travel plans.

Question ID : 26433059496

Status : Answered

Chosen Option : 1

Q.21 Select the option that can be used as a one-word substitute for the given group of words.

A person who admires himself or herself too much, especially their appearance

- Ans ☒ 1. Narcissist
☒ 2. Egoist
☒ 3. Selfish
☒ 4. Dictator

Question ID : 26433060822

Status : Answered

Chosen Option : 1

Q.22 Identify the INCORRECTLY spelt word in the given sentence.
One part of the philosophy of life's meaning consists of the systemetic attempt to identify what people have in mind when they think about the topic.

- Ans
- ☒ 1. attempt
 - ☒ 2. philosophy
 - ☒ 3. think
 - ☒ 4. systemetic

Question ID : 26433061584
Status : Answered
Chosen Option : 4

Q.23 Replace the underlined word with its synonym to make the sentence more meaningful.
Narcotic drug addiction is in vogue these days, as it is the most popular form of substance abuse.

- Ans
- ☒ 1. demand
 - ☒ 2. obscurity
 - ☒ 3. standard
 - ☒ 4. fashion

Question ID : 264330122757
Status : Answered
Chosen Option : 4

Q.24 Select the appropriate idiom that can replace the underlined phrase in the following sentence.

My father's office is at a close distance from home.

- Ans
- ☒ 1. from hand to mouth
 - ☒ 2. a part and parcel
 - ☒ 3. at a stone's throw
 - ☒ 4. at sixes and sevens

Question ID : 26433099085
Status : Answered
Chosen Option : 3

Q.25 Given below are four jumbled sentences. Select the option that gives their correct logical sequence.

- A. They stand undefeated in the realms of Shakespeare and Homer.
- B. India is a country where people are full of immense prolixity and exemplary storytelling.
- C. Additionally, the philosophical discourse and discussions on various dilemmas of life associated with the Bhagavad Gita are highly appreciated by scholars from all over the world.
- D. Mahabharata and Ramayana are two great examples of colossal works that unquestionably enjoy the virtue of being peak sources for the cultural ethos of the country.

- Ans
- ☒ 1. DACB
 - ☒ 2. BDAC
 - ☒ 3. ACBD
 - ☒ 4. BACD

Question ID : 264330120997
Status : Answered
Chosen Option : 2

Q.26 Select the most appropriate option to fill in the blank.

The house they bought was _____ spacious than their previous house.

- Ans
- ☒ 1. mostly
 - ☒ 2. most
 - ☒ 3. as
 - ☒ 4. more

Question ID : 26433061505

Status : Answered

Chosen Option : 4

Q.27 Sentences of a paragraph are given below in jumbled order. Arrange the sentences in the correct order to form a meaningful and coherent paragraph.

- A. The principles that emerged from those trials, known as the Nuremberg Code, are broadly applicable to many types of health-related research involving human participants, including clinical trials.
- B. The growing breadth and complexity of contemporary health challenges have produced a range of difficult questions that cannot always be adequately addressed by relying exclusively on existing policies, guidelines or codes of conduct.
- C. Recent formal efforts to articulate international standards of ethics applicable to health and health care can be traced to the Nuremberg trials of 1947, during which the horrors of Nazi medical experiments came to light.
- D. Ethical questions related to health, health care and public health cover topics as diverse as moral issues around reproduction, state obligations in the provision of health care services and appropriate measures to control infectious disease.

- Ans
- ☒ 1. DCAB
 - ☒ 2. ACDB
 - ☒ 3. DACB
 - ☒ 4. DABC

Question ID : 26433060487

Status : Answered

Chosen Option : 1

Q.28 Select the option that expresses the given sentence in active voice.
My request should be considered.

- Ans
- ☒ 1. Please have consider my request.
 - ☒ 2. Please do consider mine request.
 - ☒ 3. Consider my request.
 - ☒ 4. Please consider my request.

Question ID : 26433058534

Status : Answered

Chosen Option : 3

Q.29 Select the option that expresses the given sentence in indirect speech.

My brother said to me, "Don't play in the rain."

- Ans** ☒ 1. My brother said to me don't play in the rain.
☒ 2. My brother forbade me to play in the rain.
☒ 3. My brother assured me not to play in the rain.
☒ 4. My brother refused me to not play in the rain.

Question ID : 26433065167

Status : Answered

Chosen Option : 2

Comprehension:

In the following passage, some words have been deleted. Read the passage carefully and select the most appropriate option to fill in each blank.

The Maasais live in (1)_____ very beautiful part of Africa. They live on the wide plains in southern and northern Kenya and northern Tanzania. The area (2)_____ of miles of rolling grass land, on which you can find thorny bushes and rocky hills. The people move from one place to another according to the seasons, looking for grasses and other plants (3)_____ which their cattle can graze. They have no permanent home. When they want to settle in a place for some time, they build a kind of camp called a 'Manyatta', where a few families live for a (4)_____ weeks or months. Then they move on again, taking their few belongings with them, and burning the old 'Manyatta' to the ground.

SubQuestion No : 30

Q.30 Select the most appropriate option to fill in blank number 1.

- Ans** ☒ 1. that
☒ 2. a
☒ 3. their
☒ 4. some

Question ID : 264330128950

Status : Answered

Chosen Option : 2

Comprehension:

In the following passage, some words have been deleted. Read the passage carefully and select the most appropriate option to fill in each blank.

The Maasais live in (1)_____ very beautiful part of Africa. They live on the wide plains in southern and northern Kenya and northern Tanzania. The area (2)_____ of miles of rolling grass land, on which you can find thorny bushes and rocky hills. The people move from one place to another according to the seasons, looking for grasses and other plants (3)_____ which their cattle can graze. They have no permanent home. When they want to settle in a place for some time, they build a kind of camp called a 'Manyatta', where a few families live for a (4)_____ weeks or months. Then they move on again, taking their few belongings with them, and burning the old 'Manyatta' to the ground.

SubQuestion No : 31

Q.31 Select the most appropriate option to fill in blank number 2.

- Ans** ☒ 1. consists
☒ 2. surrounds
☒ 3. measures
☒ 4. considers

Question ID : 264330128951

Status : Answered

Chosen Option : 1

Comprehension:

In the following passage, some words have been deleted. Read the passage carefully and select the most appropriate option to fill in each blank.

The Maasais live in (1)_____ very beautiful part of Africa. They live on the wide plains in southern and northern Kenya and northern Tanzania. The area (2)_____ of miles of rolling grass land, on which you can find thorny bushes and rocky hills. The people move from one place to another according to the seasons, looking for grasses and other plants (3)_____ which their cattle can graze. They have no permanent home. When they want to settle in a place for some time, they build a kind of camp called a 'Manyatta', where a few families live for a (4)_____ weeks or months. Then they move on again, taking their few belongings with them, and burning the old 'Manyatta' to the ground.

SubQuestion No : 32

Q.32 Select the most appropriate option to fill in blank number 3.

Ans ☒ 1. with

☒ 2. at

☒ 3. on

☒ 4. by

Question ID : 264330128952

Status : Answered

Chosen Option : 3

Comprehension:

In the following passage, some words have been deleted. Read the passage carefully and select the most appropriate option to fill in each blank.

The Maasais live in (1)_____ very beautiful part of Africa. They live on the wide plains in southern and northern Kenya and northern Tanzania. The area (2)_____ of miles of rolling grass land, on which you can find thorny bushes and rocky hills. The people move from one place to another according to the seasons, looking for grasses and other plants (3)_____ which their cattle can graze. They have no permanent home. When they want to settle in a place for some time, they build a kind of camp called a 'Manyatta', where a few families live for a (4)_____ weeks or months. Then they move on again, taking their few belongings with them, and burning the old 'Manyatta' to the ground.

SubQuestion No : 33

Q.33 Select the most appropriate option to fill in blank number 4.

Ans ☒ 1. little

☒ 2. least

☒ 3. few

☒ 4. significant

Question ID : 264330128953

Status : Answered

Chosen Option : 3

Comprehension:

Read the following passage and answer the questions given after it.

The number of Indian students going abroad for higher studies has increased by 68.79 per cent in the past year, according to data provided by the Minister of State in the Ministry of Education, Subhas Sarkar. As per the data provided by him in the Lok Sabha, the number of Indians enrolled in foreign varsities increased from 4.44 lakh in 2021 to 7.5 lakh in 2022. He clarified that while the Bureau of Immigration and Ministry of Home Affairs maintain departure and arrival data of Indians, there is no index for capturing the category of Indians going abroad for higher education.

"Purpose of Indians going abroad for higher education is captured manually based either on their verbal disclosure or the type of visa of the destination country produced by them at the time of immigration clearance," Sarkar said.

According to the data provided by the ministry, the number of Indian nationals increased from 4.54 lakh in 2017 to 5.17 lakh in 2018. There was a significant increase in 2019 as well, with 5.86 lakh students flying out of the country. However, during the Covid pandemic, the number of Indian nationals in foreign varsities saw a drastic dip as only 2.59 lakh students were registered. While the number continued to remain low, it saw a slight increase in 2021 with 4.44 lakh registrations. However, the number has significantly jumped to 7.5 lakh in 2022. The increase in the number of Indian nationals abroad corresponds with the latest immigration reports from some of the popular study-abroad destinations such as the US, UK, and Australia. For the UK, the Immigration Statistics Report states that 127,731 visas were granted to Indian students in September 2022, an increase of 93,470 (+273 per cent) against 34,261 in 2019. Similarly, in the US, the number of Indian students has more than doubled, and the Open Doors Report 2022 has predicted that the number of Indian students heading to America is likely to surpass those from China in 2022-23.

SubQuestion No : 34

Q.34 In 2019, how many Indian students went abroad?

- Ans**
- ☐ 1. 5.17 lakh
 - ☐ 2. 4.54 lakh
 - ☒ 3. 5.86 lakh
 - ☐ 4. 4.44 lakh

Question ID : **264330128821**

Status : **Answered**

Chosen Option : **3**

Comprehension:

Read the following passage and answer the questions given after it.

The number of Indian students going abroad for higher studies has increased by 68.79 per cent in the past year, according to data provided by the Minister of State in the Ministry of Education, Subhas Sarkar. As per the data provided by him in the Lok Sabha, the number of Indians enrolled in foreign varsities increased from 4.44 lakh in 2021 to 7.5 lakh in 2022. He clarified that while the Bureau of Immigration and Ministry of Home Affairs maintain departure and arrival data of Indians, there is no index for capturing the category of Indians going abroad for higher education.

"Purpose of Indians going abroad for higher education is captured manually based either on their verbal disclosure or the type of visa of the destination country produced by them at the time of immigration clearance," Sarkar said.

According to the data provided by the ministry, the number of Indian nationals increased from 4.54 lakh in 2017 to 5.17 lakh in 2018. There was a significant increase in 2019 as well, with 5.86 lakh students flying out of the country. However, during the Covid pandemic, the number of Indian nationals in foreign varsities saw a drastic dip as only 2.59 lakh students were registered. While the number continued to remain low, it saw a slight increase in 2021 with 4.44 lakh registrations. However, the number has significantly jumped to 7.5 lakh in 2022. The increase in the number of Indian nationals abroad corresponds with the latest immigration reports from some of the popular study-abroad destinations such as the US, UK, and Australia. For the UK, the Immigration Statistics Report states that 127,731 visas were granted to Indian students in September 2022, an increase of 93,470 (+273 per cent) against 34,261 in 2019. Similarly, in the US, the number of Indian students has more than doubled, and the Open Doors Report 2022 has predicted that the number of Indian students heading to America is likely to surpass those from China in 2022-23.

SubQuestion No : 35

Q.35 Which of the following countries is not very popular with Indian students for studies?

- Ans**
- ☒ 1. Australia
 - ☒ 2. USA
 - ☒ 3. UK
 - ☒ 4. China

Question ID : 264330128823

Status : Answered

Chosen Option : 4

Comprehension:

Read the following passage and answer the questions given after it.

The number of Indian students going abroad for higher studies has increased by 68.79 per cent in the past year, according to data provided by the Minister of State in the Ministry of Education, Subhas Sarkar. As per the data provided by him in the Lok Sabha, the number of Indians enrolled in foreign varsities increased from 4.44 lakh in 2021 to 7.5 lakh in 2022. He clarified that while the Bureau of Immigration and Ministry of Home Affairs maintain departure and arrival data of Indians, there is no index for capturing the category of Indians going abroad for higher education.

"Purpose of Indians going abroad for higher education is captured manually based either on their verbal disclosure or the type of visa of the destination country produced by them at the time of immigration clearance," Sarkar said.

According to the data provided by the ministry, the number of Indian nationals increased from 4.54 lakh in 2017 to 5.17 lakh in 2018. There was a significant increase in 2019 as well, with 5.86 lakh students flying out of the country. However, during the Covid pandemic, the number of Indian nationals in foreign varsities saw a drastic dip as only 2.59 lakh students were registered. While the number continued to remain low, it saw a slight increase in 2021 with 4.44 lakh registrations. However, the number has significantly jumped to 7.5 lakh in 2022. The increase in the number of Indian nationals abroad corresponds with the latest immigration reports from some of the popular study-abroad destinations such as the US, UK, and Australia. For the UK, the Immigration Statistics Report states that 127,731 visas were granted to Indian students in September 2022, an increase of 93,470 (+273 per cent) against 34,261 in 2019. Similarly, in the US, the number of Indian students has more than doubled, and the Open Doors Report 2022 has predicted that the number of Indian students heading to America is likely to surpass those from China in 2022-23.

SubQuestion No : 36

Q.36 How do we know the number of students getting visas for studies in UK?

- Ans**
- ☒ 1. from the records of Ministry of Home Affairs
 - ☒ 2. from the Immigration Statistics Report
 - ☒ 3. from the records of the Bureau of Immigration
 - ☒ 4. from the Ministry of Education

Question ID : **264330128822**

Status : **Answered**

Chosen Option : **2**

Comprehension:

Read the following passage and answer the questions given after it.

The number of Indian students going abroad for higher studies has increased by 68.79 per cent in the past year, according to data provided by the Minister of State in the Ministry of Education, Subhas Sarkar. As per the data provided by him in the Lok Sabha, the number of Indians enrolled in foreign varsities increased from 4.44 lakh in 2021 to 7.5 lakh in 2022. He clarified that while the Bureau of Immigration and Ministry of Home Affairs maintain departure and arrival data of Indians, there is no index for capturing the category of Indians going abroad for higher education.

"Purpose of Indians going abroad for higher education is captured manually based either on their verbal disclosure or the type of visa of the destination country produced by them at the time of immigration clearance," Sarkar said.

According to the data provided by the ministry, the number of Indian nationals increased from 4.54 lakh in 2017 to 5.17 lakh in 2018. There was a significant increase in 2019 as well, with 5.86 lakh students flying out of the country. However, during the Covid pandemic, the number of Indian nationals in foreign varsities saw a drastic dip as only 2.59 lakh students were registered. While the number continued to remain low, it saw a slight increase in 2021 with 4.44 lakh registrations. However, the number has significantly jumped to 7.5 lakh in 2022. The increase in the number of Indian nationals abroad corresponds with the latest immigration reports from some of the popular study-abroad destinations such as the US, UK, and Australia. For the UK, the Immigration Statistics Report states that 127,731 visas were granted to Indian students in September 2022, an increase of 93,470 (+273 per cent) against 34,261 in 2019. Similarly, in the US, the number of Indian students has more than doubled, and the Open Doors Report 2022 has predicted that the number of Indian students heading to America is likely to surpass those from China in 2022-23.

SubQuestion No : 37

Q.37 The passage is mainly about

- Ans**
- ☒ 1. immigration of Indians to UK, US, and Australia
 - ☒ 2. Indians enrolled in foreign universities
 - ☒ 3. Indians going to America for higher studies
 - ☒ 4. Indians going abroad for higher studies

Question ID : 264330128820

Status : Answered

Chosen Option : 4

Comprehension:

Read the given passage and answer the questions that follow.

We sit in the last row, bumped about but free of stares. The bus rolls out of the dull crossroads of the city, and we are soon in the open countryside, with fields of sunflowers as far as the eye can see, their heads all facing us. Where there is no water, the land reverts to the desert. While still on level ground, we see in the distance the tall range of the Mount Bogda, abrupt like a shining prism laid horizontally on the desert surface. It is over 5,000 metres high, and the peaks are under permanent snow, in powerful contrast to the flat desert all around. Heaven lake lies part of the way up this range, about 2,000 metres above sea level, at the foot of one of the highest snow-peaks.

As the bus climbs, the sky, brilliant before, grows overcast. I have brought nothing warm to wear. It is all down at the hotel in Urumqi. Rain begins to fall. The man behind me is eating overpoweringly smelly goat's cheese. The bus window leaks inhospitably but reveals a beautiful view. We have passed quickly from the desert through arable land to pasture and the ground is now green with grass, the slopes dark with pine. A few cattle drink at a clear stream flowing past moss-covered stones; it is a Constable landscape. The stream changes into a white torrent, and as we climb higher I wish more and more that I had brought with me something warmer than the pair of shorts that have served me so well in the desert. The stream (which, we are told, rises in Heaven Lake) disappears, and we continue our slow ascent. About noon, we arrive at Heaven Lake, and look for a place to stay at the foot, which is the resort area. We get a room in a small cottage, and I am happy to note that there are thick quilts on the bed.

Standing outside the cottage, we survey our surroundings. Heaven Lake is long, sardine-shaped and fed by snowmelt from a stream at its head. The lake is an intense blue, surrounded on all sides by green mountain walls, dotted with distant sheep. At the head of the lake, beyond the delta of the inflowing stream, is a massive snow-capped peak which dominates the vista; it is part of a series of peaks that culminate, a little out of view, in Mount Bogda itself.

For those who live in the resort, there is a small mess-hall by the shore. We eat here sometimes, and sometimes buy food from the vendors outside, who sell kabab and naan until the last buses leave. The kababs, cooked on skewers over charcoal braziers, are particularly good; highly spiced and well-done. Horse's milk is available too from the local Kazakh herdsmen, but I decline this. I am so affected by the cold that Mr. Cao, the relaxed young man who runs the mess, lends me a spare pair of trousers, several sizes too large but more than comfortable. Once I am warm again, I feel a pre-dinner spurt of energy—dinner will be long in coming—and I ask him whether the lake is good for swimming in.

SubQuestion No : 38

Q.38 Select the most appropriate **ANTONYM** of the word 'accept' from the passage.

- Ans ☒ 1. Reject
☒ 2. Refuse
☒ 3. Decline
☒ 4. Turn down

Question ID : 264330128933

Status : Answered

Chosen Option : 3

Comprehension:

Read the given passage and answer the questions that follow.

We sit in the last row, bumped about but free of stares. The bus rolls out of the dull crossroads of the city, and we are soon in the open countryside, with fields of sunflowers as far as the eye can see, their heads all facing us. Where there is no water, the land reverts to the desert. While still on level ground, we see in the distance the tall range of the Mount Bogda, abrupt like a shining prism laid horizontally on the desert surface. It is over 5,000 metres high, and the peaks are under permanent snow, in powerful contrast to the flat desert all around. Heaven lake lies part of the way up this range, about 2,000 metres above sea level, at the foot of one of the highest snow-peaks.

As the bus climbs, the sky, brilliant before, grows overcast. I have brought nothing warm to wear. It is all down at the hotel in Urumqi. Rain begins to fall. The man behind me is eating overpoweringly smelly goat's cheese. The bus window leaks inhospitably but reveals a beautiful view. We have passed quickly from the desert through arable land to pasture and the ground is now green with grass, the slopes dark with pine. A few cattle drink at a clear stream flowing past moss-covered stones; it is a Constable landscape. The stream changes into a white torrent, and as we climb higher I wish more and more that I had brought with me something warmer than the pair of shorts that have served me so well in the desert. The stream (which, we are told, rises in Heaven Lake) disappears, and we continue our slow ascent. About noon, we arrive at Heaven Lake, and look for a place to stay at the foot, which is the resort area. We get a room in a small cottage, and I am happy to note that there are thick quilts on the bed.

Standing outside the cottage, we survey our surroundings. Heaven Lake is long, sardine-shaped and fed by snowmelt from a stream at its head. The lake is an intense blue, surrounded on all sides by green mountain walls, dotted with distant sheep. At the head of the lake, beyond the delta of the inflowing stream, is a massive snow-capped peak which dominates the vista; it is part of a series of peaks that culminate, a little out of view, in Mount Bogda itself.

For those who live in the resort, there is a small mess-hall by the shore. We eat here sometimes, and sometimes buy food from the vendors outside, who sell kabab and naan until the last buses leave. The kababs, cooked on skewers over charcoal braziers, are particularly good; highly spiced and well-done. Horse's milk is available too from the local Kazakh herdsmen, but I decline this. I am so affected by the cold that Mr. Cao, the relaxed young man who runs the mess, lends me a spare pair of trousers, several sizes too large but more than comfortable. Once I am warm again, I feel a pre-dinner spurt of energy—dinner will be long in coming—and I ask him whether the lake is good for swimming in.

SubQuestion No : 39

Q.39 Select an appropriate title for the passage.

- Ans** ☒ 1. Shorts to Trousers
- ☒ 2. Lake Heaven
- ☒ 3. Peasant Life
- ☒ 4. Journey to Mount Bogda

Question ID : 264330128932

Status : Answered

Chosen Option : 4

Comprehension:

Read the given passage and answer the questions that follow.

We sit in the last row, bumped about but free of stares. The bus rolls out of the dull crossroads of the city, and we are soon in the open countryside, with fields of sunflowers as far as the eye can see, their heads all facing us. Where there is no water, the land reverts to the desert. While still on level ground, we see in the distance the tall range of the Mount Bogda, abrupt like a shining prism laid horizontally on the desert surface. It is over 5,000 metres high, and the peaks are under permanent snow, in powerful contrast to the flat desert all around. Heaven lake lies part of the way up this range, about 2,000 metres above sea level, at the foot of one of the highest snow-peaks.

As the bus climbs, the sky, brilliant before, grows overcast. I have brought nothing warm to wear. It is all down at the hotel in Urumqi. Rain begins to fall. The man behind me is eating overpoweringly smelly goat's cheese. The bus window leaks inhospitably but reveals a beautiful view. We have passed quickly from the desert through arable land to pasture and the ground is now green with grass, the slopes dark with pine. A few cattle drink at a clear stream flowing past moss-covered stones; it is a Constable landscape. The stream changes into a white torrent, and as we climb higher I wish more and more that I had brought with me something warmer than the pair of shorts that have served me so well in the desert. The stream (which, we are told, rises in Heaven Lake) disappears, and we continue our slow ascent. About noon, we arrive at Heaven Lake, and look for a place to stay at the foot, which is the resort area. We get a room in a small cottage, and I am happy to note that there are thick quilts on the bed.

Standing outside the cottage, we survey our surroundings. Heaven Lake is long, sardine-shaped and fed by snowmelt from a stream at its head. The lake is an intense blue, surrounded on all sides by green mountain walls, dotted with distant sheep. At the head of the lake, beyond the delta of the inflowing stream, is a massive snow-capped peak which dominates the vista; it is part of a series of peaks that culminate, a little out of view, in Mount Bogda itself.

For those who live in the resort, there is a small mess-hall by the shore. We eat here sometimes, and sometimes buy food from the vendors outside, who sell kabab and naan until the last buses leave. The kababs, cooked on skewers over charcoal braziers, are particularly good; highly spiced and well-done. Horse's milk is available too from the local Kazakh herdsmen, but I decline this. I am so affected by the cold that Mr. Cao, the relaxed young man who runs the mess, lends me a spare pair of trousers, several sizes too large but more than comfortable. Once I am warm again, I feel a pre-dinner spurt of energy—dinner will be long in coming—and I ask him whether the lake is good for swimming in.

SubQuestion No : 40

Q.40 What is the tone of the passage?

- Ans ☒ 1. Romantic
☒ 2. Angry
☒ 3. Serene
☒ 4. Agitated

Question ID : 264330128931

Status : Answered

Chosen Option : 3

Comprehension:

Read the given passage and answer the questions that follow.

We sit in the last row, bumped about but free of stares. The bus rolls out of the dull crossroads of the city, and we are soon in the open countryside, with fields of sunflowers as far as the eye can see, their heads all facing us. Where there is no water, the land reverts to the desert. While still on level ground, we see in the distance the tall range of the Mount Bogda, abrupt like a shining prism laid horizontally on the desert surface. It is over 5,000 metres high, and the peaks are under permanent snow, in powerful contrast to the flat desert all around. Heaven lake lies part of the way up this range, about 2,000 metres above sea level, at the foot of one of the highest snow-peaks.

As the bus climbs, the sky, brilliant before, grows overcast. I have brought nothing warm to wear. It is all down at the hotel in Urumqi. Rain begins to fall. The man behind me is eating overpoweringly smelly goat's cheese. The bus window leaks inhospitably but reveals a beautiful view. We have passed quickly from the desert through arable land to pasture and the ground is now green with grass, the slopes dark with pine. A few cattle drink at a clear stream flowing past moss-covered stones; it is a Constable landscape. The stream changes into a white torrent, and as we climb higher I wish more and more that I had brought with me something warmer than the pair of shorts that have served me so well in the desert. The stream (which, we are told, rises in Heaven Lake) disappears, and we continue our slow ascent. About noon, we arrive at Heaven Lake, and look for a place to stay at the foot, which is the resort area. We get a room in a small cottage, and I am happy to note that there are thick quilts on the bed.

Standing outside the cottage, we survey our surroundings. Heaven Lake is long, sardine-shaped and fed by snowmelt from a stream at its head. The lake is an intense blue, surrounded on all sides by green mountain walls, dotted with distant sheep. At the head of the lake, beyond the delta of the inflowing stream, is a massive snow-capped peak which dominates the vista; it is part of a series of peaks that culminate, a little out of view, in Mount Bogda itself.

For those who live in the resort, there is a small mess-hall by the shore. We eat here sometimes, and sometimes buy food from the vendors outside, who sell kabab and naan until the last buses leave. The kababs, cooked on skewers over charcoal braziers, are particularly good; highly spiced and well-done. Horse's milk is available too from the local Kazakh herdsmen, but I decline this. I am so affected by the cold that Mr. Cao, the relaxed young man who runs the mess, lends me a spare pair of trousers, several sizes too large but more than comfortable. Once I am warm again, I feel a pre-dinner spurt of energy—dinner will be long in coming—and I ask him whether the lake is good for swimming in.

SubQuestion No : 41

Q.41 What is the protagonist wearing in the bus?

- Ans**
- ☒ 1. A dhoti
 - ☒ 2. Trousers
 - ☒ 3. A pair of shorts
 - ☒ 4. Long sleeved shirt

Question ID : 264330128930

Status : Answered

Chosen Option : 3

Comprehension:

Read the following passage and answer the questions given after it.

From January 28 to February 4, 2023, a Chinese-operated, large white high-altitude balloon was seen in North American airspace, including Alaska, western Canada, and the contiguous United States. The American and Canadian militaries asserted that the balloon was for surveillance, while the Chinese government maintained it was a civilian meteorological research airship that had been blown off course. Analysts said that the balloon's flight path and structural characteristics made it dissimilar from those which have typically been used for meteorological research. The U.S. Department of State said that the balloon was capable of locating electronic communication devices, including mobile phones and radios, and that American U-2 reconnaissance aircraft deployed to track the balloon in the air revealed that the balloon carried antennas and other equipment "clearly for intelligence surveillance and inconsistent with the equipment on board weather balloons." The State Department said that the spy balloon was part of a global Chinese military-directed surveillance effort in which Chinese spy balloons have flown over more than 40 nations in five continents.

On February 4, the U.S. Air Force shot down the balloon over U.S. territorial waters off the coast of South Carolina, on the order of U.S. President Joe Biden. Debris from the wreckage was recovered and sent to the FBI Laboratory in Quantico, Virginia, for analysis.

The incident increased U.S.-China tensions. The incident prompted U.S. Secretary of State Antony Blinken to delay a diplomatic visit to Beijing, which was set to be his first since 2018. It also further strained Canada-China relations, as Canada summoned the Chinese ambassador because of the violation of Canadian airspace. On February 3, the U.S. Department of Defense announced that a second Chinese balloon was passing over Latin America, which China also said belonged to it. On February 10, the Air Force shot down another aerial object over U.S. territory at the order of President Biden.

SubQuestion No : 42

Q.42 The passage is mainly about

- Ans**
- ☒ 1. the strained relations between US and China
 - ☒ 2. a Chinese spy balloon flying over US and Canadian territories
 - ☒ 3. China's global military-directed surveillance
 - ☒ 4. Chinese balloons flying all over the world

Question ID : 264330128805

Status : Answered

Chosen Option : 2

Comprehension:

Read the following passage and answer the questions given after it.

From January 28 to February 4, 2023, a Chinese-operated, large white high-altitude balloon was seen in North American airspace, including Alaska, western Canada, and the contiguous United States. The American and Canadian militaries asserted that the balloon was for surveillance, while the Chinese government maintained it was a civilian meteorological research airship that had been blown off course. Analysts said that the balloon's flight path and structural characteristics made it dissimilar from those which have typically been used for meteorological research. The U.S. Department of State said that the balloon was capable of locating electronic communication devices, including mobile phones and radios, and that American U-2 reconnaissance aircraft deployed to track the balloon in the air revealed that the balloon carried antennas and other equipment "clearly for intelligence surveillance and inconsistent with the equipment on board weather balloons." The State Department said that the spy balloon was part of a global Chinese military-directed surveillance effort in which Chinese spy balloons have flown over more than 40 nations in five continents.

On February 4, the U.S. Air Force shot down the balloon over U.S. territorial waters off the coast of South Carolina, on the order of U.S. President Joe Biden. Debris from the wreckage was recovered and sent to the FBI Laboratory in Quantico, Virginia, for analysis.

The incident increased U.S.-China tensions. The incident prompted U.S. Secretary of State Antony Blinken to delay a diplomatic visit to Beijing, which was set to be his first since 2018. It also further strained Canada-China relations, as Canada summoned the Chinese ambassador because of the violation of Canadian airspace. On February 3, the U.S. Department of Defense announced that a second Chinese balloon was passing over Latin America, which China also said belonged to it. On February 10, the Air Force shot down another aerial object over U.S. territory at the order of President Biden.

SubQuestion No : 43

Q.43 Read the statements given below.

A. The US Air Force shot down the Chinese balloon over US territorial waters.

B. Tensions between China and US have increased and the visit of the U.S. Secretary of State to Beijing has been postponed.

Ans ☒ 1. Both A and B are true but B is not the correct reason for A.

☒ 2. Both A and B are true and B is the correct reason for A.

☒ 3. A is false and B is true.

☒ 4. A is true and B is false.

Question ID : 264330128808

Status : Answered

Chosen Option : 1

Comprehension:

Read the following passage and answer the questions given after it.

From January 28 to February 4, 2023, a Chinese-operated, large white high-altitude balloon was seen in North American airspace, including Alaska, western Canada, and the contiguous United States. The American and Canadian militaries asserted that the balloon was for surveillance, while the Chinese government maintained it was a civilian meteorological research airship that had been blown off course. Analysts said that the balloon's flight path and structural characteristics made it dissimilar from those which have typically been used for meteorological research. The U.S. Department of State said that the balloon was capable of locating electronic communication devices, including mobile phones and radios, and that American U-2 reconnaissance aircraft deployed to track the balloon in the air revealed that the balloon carried antennas and other equipment "clearly for intelligence surveillance and inconsistent with the equipment on board weather balloons." The State Department said that the spy balloon was part of a global Chinese military-directed surveillance effort in which Chinese spy balloons have flown over more than 40 nations in five continents.

On February 4, the U.S. Air Force shot down the balloon over U.S. territorial waters off the coast of South Carolina, on the order of U.S. President Joe Biden. Debris from the wreckage was recovered and sent to the FBI Laboratory in Quantico, Virginia, for analysis.

The incident increased U.S.-China tensions. The incident prompted U.S. Secretary of State Antony Blinken to delay a diplomatic visit to Beijing, which was set to be his first since 2018. It also further strained Canada-China relations, as Canada summoned the Chinese ambassador because of the violation of Canadian airspace. On February 3, the U.S. Department of Defense announced that a second Chinese balloon was passing over Latin America, which China also said belonged to it. On February 10, the Air Force shot down another aerial object over U.S. territory at the order of President Biden.

SubQuestion No : 44

Q.44 How did US make sure that the Balloon flying over its territory was a 'spy' balloon?

- Ans**
- ☒ 1. the FBI lab confirmed that it was a spy balloon
 - ☒ 2. the analysts studied its flight path and said so
 - ☒ 3. it's reconnaissance aircraft saw the antennas and equipment of the balloon
 - ☒ 4. it got the samples of the balloon checked in a lab

Question ID : 264330128807

Status : Answered

Chosen Option : 3

Comprehension:

Read the following passage and answer the questions given after it.

From January 28 to February 4, 2023, a Chinese-operated, large white high-altitude balloon was seen in North American airspace, including Alaska, western Canada, and the contiguous United States. The American and Canadian militaries asserted that the balloon was for surveillance, while the Chinese government maintained it was a civilian meteorological research airship that had been blown off course. Analysts said that the balloon's flight path and structural characteristics made it dissimilar from those which have typically been used for meteorological research. The U.S. Department of State said that the balloon was capable of locating electronic communication devices, including mobile phones and radios, and that American U-2 reconnaissance aircraft deployed to track the balloon in the air revealed that the balloon carried antennas and other equipment "clearly for intelligence surveillance and inconsistent with the equipment on board weather balloons." The State Department said that the spy balloon was part of a global Chinese military-directed surveillance effort in which Chinese spy balloons have flown over more than 40 nations in five continents.

On February 4, the U.S. Air Force shot down the balloon over U.S. territorial waters off the coast of South Carolina, on the order of U.S. President Joe Biden. Debris from the wreckage was recovered and sent to the FBI Laboratory in Quantico, Virginia, for analysis.

The incident increased U.S.-China tensions. The incident prompted U.S. Secretary of State Antony Blinken to delay a diplomatic visit to Beijing, which was set to be his first since 2018. It also further strained Canada-China relations, as Canada summoned the Chinese ambassador because of the violation of Canadian airspace. On February 3, the U.S. Department of Defense announced that a second Chinese balloon was passing over Latin America, which China also said belonged to it. On February 10, the Air Force shot down another aerial object over U.S. territory at the order of President Biden.

SubQuestion No : 45

Q.45 The word 'contiguous' means

- Ans** ☒ 1. adjoining
☐ 2. far off
☐ 3. spreading
☐ 4. separated

Question ID : 264330128806

Status : Answered

Chosen Option : 1

Section : General Awareness

Q.1 Who composed Tabaqat-i-Nasiri in the Delhi Sultanate period?

- Ans** ☐ 1. Hasan Nizami
☐ 2. Amir Khusrau
☒ 3. Minhaj-us-Siraj
☐ 4. Ziauddin Barani

Question ID : 264330109013

Status : Not Answered

Chosen Option : --

Q.2 Identify the correct statement.

- Ans** ☐ 1. Resistance of a wire depends on the length and density of the wire.
☐ 2. Specific resistance is the same for all conductors.
☒ 3. Resistance of a wire depends on the length and cross-section of the wire.
☐ 4. Specific resistance is dependent on the cross-sectional area of the wire.

Question ID : 264330109879

Status : Answered

Chosen Option : 3

Q.3 Which scientist suggested that the magnet must also exert an equal and opposite force on the current-carrying conductor?

- Ans** ☒ 1. Michael Faraday
☒ 2. Andre Marie Ampere
☒ 3. Joseph Henry
☒ 4. William Gilbert

Question ID : 264330123853
Status : Answered
Chosen Option : 1

Q.4 In which year was the Estimates Committee constituted for the first time in India?

- Ans** ☒ 1. 1948
☒ 2. 1950
☒ 3. 1947
☒ 4. 1949

Question ID : 26433064723
Status : Answered
Chosen Option : 1

Q.5 Identify which of the following statements are correct.

- 1.Hindustan Copper Limited (HCL) was incorporated on 9 November 1967.
2.The Khetri Copper Complex (KCC) is located in Rajasthan.
3.The headquarters of Mineral Exploration Consultancy Ltd. is located in Jaipur.

- Ans** ☒ 1. 1 and 2 only
☒ 2. 1, 2 and 3
☒ 3. 2 and 3 only
☒ 4. 1 and 3 only

Question ID : 264330121532
Status : Not Answered
Chosen Option : --

Q.6 Which part of the Constitution of India consists of the idea of a Welfare State?

- Ans** ☒ 1. Directive Principles of State Policy
☒ 2. Fundamental Duties
☒ 3. Fundamental Rights
☒ 4. Preamble

Question ID : 264330110801
Status : Answered
Chosen Option : 1

Q.7 Which of the following is constituted under Article 280 of the Constitution of India?

- Ans ☐ 1. Advocate General
☐ 2. Central Vigilance Commission
☒ 3. Finance Commission
☐ 4. National Commission for Women

Question ID : 264330110588

Status : Answered

Chosen Option : 3

Q.8 In India, which of the following statements is true about the National Investment Fund?

Statements:

I. It was created in 2005.

II. 75% of its annual income was to be used for schemes promoting health, education and employment.

III. It was dissolved in 2018.

- Ans ☐ 1. Only statement I
☐ 2. Only statement II
☐ 3. Only statements I and III
☒ 4. Only statements I and II

Question ID : 26433059344

Status : Not Answered

Chosen Option : --

Q.9 Bhimbetka, a noted site of the Palaeolithic period, is located in which state of India?

- Ans ☐ 1. Bihar
☐ 2. Uttar Pradesh
☐ 3. Rajasthan
☒ 4. Madhya Pradesh

Question ID : 264330108990

Status : Answered

Chosen Option : 4

Q.10

Match List-I and List-II regarding the National Sports awards 2022.

List-I

- a) Arjun Award
- b) Dronacharya Award Regular
- c) Dronacharya Award Life time
- d) Dhyanchand Award

List-II

- i) Jiwant Singh Teja
- ii) Seema Punia
- iii) Ashwini Akkunj
- iv) Dinesh Jawahar Lad

- Ans ☐ 1. a-i, b-ii, c-iv, d-iii
☐ 2. a-ii, b-i, c-iii, d-iv
☐ 3. a-i, b-ii, c-iii, d-iv
☒ 4. a-ii, b-i, c-iv, d-iii

Question ID : 264330122943

Status : Not Answered

Chosen Option : --

Q.11 The Act that is also known as 'Morley-Minto Reforms' is:

- Ans**
- ☒ 1. Government of India Act, 1935
 - ☒ 2. Indian Councils Act, 1909
 - ☒ 3. Rowlatt Act, 1919
 - ☒ 4. Government of India Act, 1912

Question ID : **26433055625**
Status : **Answered**
Chosen Option : **2**

Q.12 Which of the following was the first B vitamin discovered in 1897?

- Ans**
- ☒ 1. Folate
 - ☒ 2. Biotin
 - ☒ 3. Riboflavin
 - ☒ 4. Thiamine

Question ID : **264330123820**
Status : **Answered**
Chosen Option : **4**

Q.13 In which year did Albert Einstein predict a new state of matter, the Bose-Einstein condensate (BEC), based on a quantum formulation by the Indian physicist Satyendra Nath Bose?

- Ans**
- ☒ 1. 1935
 - ☒ 2. 1924
 - ☒ 3. 1930
 - ☒ 4. 1919

Question ID : **264330123872**
Status : **Answered**
Chosen Option : **3**

Q.14 What was India's rank in the Asia-Pacific Personalised Health Index released by the Economist Intelligence Unit in January 2021?

- Ans**
- ☒ 1. 10th
 - ☒ 2. 9th
 - ☒ 3. 11th
 - ☒ 4. 12th

Question ID : **26433072901**
Status : **Not Answered**
Chosen Option : **--**

Q.15 Which of the following options is correct regarding sexually transmitted disease (STD)?

Statement A: Sexually transmitted diseases (STDs) are infections transmitted from an infected person to an uninfected person through sexual contact.

Statement B: HIV, HPV and Hepatitis B virus is responsible for STD.

- Ans**
- ☒ 1. Both Statements A and B incorrect
 - ☒ 2. Only Statement B is correct
 - ☒ 3. Both Statements A and B correct
 - ☒ 4. Only Statement A is correct

Question ID : 264330121164

Status : Answered

Chosen Option : 3

Q.16 What do you call the type of drugs that mimic the natural messenger by switching on the receptor?

- Ans**
- ☒ 1. Antidepressants
 - ☒ 2. Depressants
 - ☒ 3. Agonist
 - ☒ 4. Antagonists

Question ID : 264330123847

Status : Not Answered

Chosen Option : --

Q.17 Identify a type of season that is NOT a part of the four seasons of India.

- Ans**
- ☒ 1. The cold weather season
 - ☒ 2. The hot weather season
 - ☒ 3. The southwest monsoon season
 - ☒ 4. The southeast monsoon season

Question ID : 264330123844

Status : Answered

Chosen Option : 4

Q.18 Which of the following statements are correct regarding the benefits of the retired President of India?

A. The former President of India will also be entitled to a monthly pension of ₹2.5 lakh.

B. He/She is entitled to a secretarial staff comprising a private secretary, a personal assistant, an additional private secretary, two peons, and office expenses up to ₹1 lakh per annum.

C. He/She is also entitled to free highest-class travel anywhere in India, accompanied by one person, by rail, air, or steamer.

- Ans**
- ☒ 1. A and B only
 - ☒ 2. B and C only
 - ☒ 3. A and C only
 - ☒ 4. A, B and C

Question ID : 264330121543

Status : Not Answered

Chosen Option : --

Q.19 Which option correctly represents the countries in decreasing order of HDI, as released in September 2022?

- Ans** ☒ 1. Switzerland – Denmark – Japan - Niger
☒ 2. Japan – Switzerland – Denmark - Niger
☒ 3. Niger – Japan – Denmark – Switzerland
☒ 4. Denmark – Japan – Switzerland – Niger

Question ID : 264330121483

Status : Answered

Chosen Option : 3

Q.20 Identify which of the following statements about agriculture in India are correct.
1. Rabi crops are sown in India from October to December and harvested from April to June.
2. Important crops grown during Rabi in India are paddy, maize, gram, soyabean and mustard.
3. Aus, Aman and Boro are three crops of paddy in Assam, West Bengal and Odisha.

- Ans** ☒ 1. 1, 2 and 3
☒ 2. 1 and 3 only
☒ 3. 2 and 3 only
☒ 4. 1 and 2 only

Question ID : 264330121513

Status : Not Answered

Chosen Option : --

Q.21 Which state recorded the lowest literacy rate in the 2011 census?

- Ans** ☒ 1. Bihar
☒ 2. Maharashtra
☒ 3. Arunachal Pradesh
☒ 4. Kerala

Question ID : 264330109506

Status : Answered

Chosen Option : 1

Q.22 Deficiency of which of the following vitamins causes excessive bleeding from wounds?

- Ans** ☒ 1. Vitamin D
☒ 2. Vitamin E
☒ 3. Vitamin A
☒ 4. Vitamin K

Question ID : 26433064115

Status : Answered

Chosen Option : 4

Q.23 Which of the following statements is/are correct regarding changes to Atal Pension Yojana Scheme (APY) done in 2022?

- A. According to the new criteria, any citizen who is or has been an income-tax payer, shall not be eligible to join APY after 1 October 2022.
B. Subscribers would receive the guaranteed minimum monthly pension of ₹1,000 or ₹2,000 or ₹3,000 or ₹4,000 or ₹5,000 at the age of 80 years.
C. As per the new rules, subscribers can make contributions to APY on a monthly basis only.

Ans ☒ 1. B and C only
☒ 2. A, B and C
☒ 3. A and C only
☒ 4. A only

Question ID : 264330122937
Status : Not Answered
Chosen Option : --

Q.24 Which of the following is considered a capital expense?

Ans ☒ 1. Pension
☒ 2. Payment of salaries
☒ 3. Subsidies
☒ 4. Construction of school buildings

Question ID : 264330123883
Status : Answered
Chosen Option : 4

Q.25 A light bulb working on a 18 V battery draws a current of 3 A. What will be the resistance of the bulb?

Ans ☒ 1. 6 Ω
☒ 2. 2 Ω
☒ 3. 4 Ω
☒ 4. 3 Ω

Question ID : 264330109882
Status : Answered
Chosen Option : 1

Section : Computer Knowledge Module

Q.1 _____ is a type of malware that is often disguised as legitimate software.

Ans ☒ 1. Trojan
☒ 2. Ransomware
☒ 3. Roolkit
☒ 4. Keylogger

Question ID : 264330128728
Status : Answered
Chosen Option : 1

Q.2 In MS-Excel 365 which of the following appears across the top of the screen and below the title bar and contains all the commands, formulas and features needed to create data-intense spreadsheets?

- Ans**
- ☐ 1. Scroll bars
 - ☐ 2. Status bar
 - ☐ 3. Ruler
 - ☒ 4. Ribbon

Question ID : **264330128749**
Status : **Answered**
Chosen Option : **2**

Q.3 _____ is also known as electronic disk.

- Ans**
- ☐ 1. USB Sticks
 - ☐ 2. Network Storage Servers
 - ☒ 3. Solid-State Drive
 - ☐ 4. USB Hard Drives

Question ID : **264330128762**
Status : **Answered**
Chosen Option : **3**

Q.4 _____ is a high-speed device used in CPU that is utilised to store data temporarily during processing.

- Ans**
- ☐ 1. Arithmetic and Logic Unit (ALU)
 - ☐ 2. Auxiliary Memory
 - ☐ 3. Control Unit
 - ☒ 4. Registers

Question ID : **264330128760**
Status : **Answered**
Chosen Option : **2**

Q.5 Which among the following statements is incorrect?

- Ans**
- ☐ 1. Cache memory keeps the programs that can be run in a short amount of time.
 - ☒ 2. Cache memory stores data in permanent use.
 - ☐ 3. Cache memory is faster than main memory.
 - ☐ 4. The size of cache is usually small.

Question ID : **264330128761**
Status : **Answered**
Chosen Option : **2**

Q.6 Which of the following option of print settings is used to choose only specific pages in MS-Word 365?

- Ans**
- ☒ 1. Print All Pages
 - ☒ 2. Print Current Page
 - ☒ 3. Print Selection
 - ☒ 4. Custom Print

Question ID : **264330128773**
Status : **Answered**
Chosen Option : **4**

Q.7 _____ displays a list of utility configure the computer system and install software and hardware.

- Ans**
- ☒ 1. Control Panel
 - ☒ 2. Help and Support
 - ☒ 3. Taskbar
 - ☒ 4. Run

Question ID : **264330128750**
Status : **Answered**
Chosen Option : **1**

Q.8 Which of the following is correct option in MS-Excel 365, if a value in a cell of column A and row 10 is to be referred in a function or formula?

- Ans**
- ☒ 1. A -10
 - ☒ 2. 10A
 - ☒ 3. A10
 - ☒ 4. A :10

Question ID : **264330128751**
Status : **Answered**
Chosen Option : **3**

Q.9 While _____, data transfers from the customers' machine to the server.

- Ans**
- ☒ 1. browsing
 - ☒ 2. uploading
 - ☒ 3. forwarding
 - ☒ 4. downloading

Question ID : **264330128752**
Status : **Answered**
Chosen Option : **2**

Q.10 Which among the following is incorrect about Laser Printers?

Ans ☒ 1.

Uses laser lights for producing dots to form characters on a page

☒ 2. Can print multiple copies at a time

☒ 3. Fast speed

☒ 4. Supports multiple fonts and sizes

Question ID : 264330128784

Status : Answered

Chosen Option : 1

Q.11 Shading option in MS-Word 365 is used for _____.

Ans ☒ 1. changing the color around the selected text

☒ 2. changing the color behind the selected text

☒ 3. changing the color of the selected text

☒ 4. making the text pop by highlighting it

Question ID : 264330128775

Status : Answered

Chosen Option : 2

Q.12 Which of the following is NOT an example of e-mail service provider?

I. Outlook

II. Gmail

III. Yandex

Ans ☒ 1. I and III

☒ 2. Only III

☒ 3. All are e-mail service providers

☒ 4. Only I

Question ID : 264330128756

Status : Answered

Chosen Option : 3

Q.13 Which among the following statements is incorrect?

Ans ☒ 1. Trojan looks like a legitimate software.

☒ 2.

Some Trojans create backdoors to give malicious users access to the system.

☒ 3. Trojan self-replicate and infects other files.

☒ 4.

Trojan spreads through user interaction such as opening an email attachment or downloading and executing a file from the Internet.

Question ID : 264330128774

Status : Answered

Chosen Option : 2

Q.14 The memory unit that communicates directly with the CPU is called _____ memory.

Ans ☒ 1. cache

☒ 2. backup

☒ 3. main

☒ 4. auxiliary

Question ID : 264330128765

Status : Answered

Chosen Option : 4

Q.15 The instruction that is not to be executed immediately is placed in the _____.

Ans ☒ 1. Current Instruction Register (CIR)

☒ 2. Memory Address Register (MAR)

☒ 3. Program Counter (PC)

☒ 4. Instruction Buffer Register (IBR)

Question ID : 264330128779

Status : Not Answered

Chosen Option : --

Q.16 Video Graphics Array connectors are those which connect the monitor to a computer's video card and has _____ holes.

Ans ☒ 1. 10

☒ 2. 12

☒ 3. 18

☒ 4. 15

Question ID : 264330128766

Status : Answered

Chosen Option : 4

Q.17 Which of the following is keyboard shortcut to reload the current page in Google search engine?

- Ans**
- ☒ 1. F7
 - ☒ 2. F5
 - ☒ 3. F1
 - ☒ 4. F3

Question ID : **264330128778**
Status : **Answered**
Chosen Option : **2**

Q.18 Which among the following keyboard shortcuts is used to insert a hyperlink for the selected text in Microsoft Word?

- Ans**
- ☒ 1. Ctrl + K
 - ☒ 2. Ctrl + M
 - ☒ 3. Ctrl + H
 - ☒ 4. Ctrl + Z

Question ID : **264330128763**
Status : **Answered**
Chosen Option : **1**

Q.19 _____ is a passage to connect two networks that may work on different networking models.

- Ans**
- ☒ 1. Router
 - ☒ 2. Switch
 - ☒ 3. Gateway
 - ☒ 4. Hub

Question ID : **264330128767**
Status : **Answered**
Chosen Option : **3**

Q.20 _____ cookies track you and expose your privacy.

- Ans**
- ☒ 1. Persistent
 - ☒ 2. Third-party
 - ☒ 3. Zombi
 - ☒ 4. Session

Question ID : **264330128757**
Status : **Answered**
Chosen Option : **2**

Combined Graduate Level Examination Tier II 2022

Roll Number	
Venue Name	iON Digital Zone iDZ Gegal Industrial Area
Exam Date	03/03/2023
Exam Time	9:00 AM - 12:00 PM
Subject	CGLE 2022 Tier II Paper I

Section : Mathematical Abilities

Q.1 A boat covers 35 km downstream in 2 h and covers the same distance upstream in 7 h.
Find the speed (in km/h) of the boat in still water.

Ans ✓ 1. 11.25

✗ 2. 28.75

✗ 3. 18.25

✗ 4. 10.55

Question ID : 264330121726

Status : Answered

Chosen Option : 1

Q.2 What is the compound interest on a sum of ₹25,000 after three years at a rate of 12 per cent per annum interest compounded yearly?

Ans ✓ 1. ₹10,123.20

✗ 2. ₹9,824.00

✗ 3. ₹10,520.00

✗ 4. ₹9,956.86

Question ID : 264330126380

Status : Answered

Chosen Option : 1

Q.3 The LCM of $x^2 - 8x + 15$ and $x^2 - 5x + 6$ is:

Ans ✓ 1. $(x - 2)(x - 3)(x - 5)$

✗ 2. $(x - 6)^2(x + 1)(x - 3)$

✗ 3. $(x - 6)(x + 1)(x - 3)$

✗ 4. $(x + 6)(x + 1)(x - 3)$

Question ID : 26433090279

Status : Answered

Chosen Option : 1

Q.4 The cost of 3 kg of rice is ₹180. The cost of 8 kg of rice is equal to that of 5 kg of pulse. The cost of 15 kg of pulses is equal to that of 2 kg of tea. The cost of 3 kg of tea is equal to that of 6 kg of walnuts. What is the cost (in ₹) of 10 kg of walnuts?

- Ans
- ☐ 1. 2400
 - ☐ 2. 3200
 - ☐ 3. 2800
 - ☒ 4. 3600

Question ID : 264330121746

Status : Answered

Chosen Option : 4

Q.5 What is the ratio of the simple interest earned on a certain amount at the rate of 21% per annum for 8 years to that earned on the same sum at the same rate for 21 years?

- Ans
- ☒ 1. 8:21
 - ☐ 2. 21:5
 - ☐ 3. 5:21
 - ☐ 4. 21:8

Question ID : 264330122692

Status : Answered

Chosen Option : 1

Q.6 Select the INCORRECT formula from the following options.

- Ans
- ☐ 1. $\operatorname{cosec}^2 \theta - \cot^2 \theta = 1$
 - ☐ 2. $\sin^2 \theta + \cos^2 \theta = 1$
 - ☒ 3. $\sec^2 \theta + \cos^2 \theta = 1$
 - ☐ 4. $\sec^2 \theta - \tan^2 \theta = 1$

Question ID : 264330126432

Status : Answered

Chosen Option : 3

Q.7 Find the standard deviation of the following data (rounded off to two decimal places).
5, 3, 4, 7

- Ans
- ☒ 1. 1.48
 - ☐ 2. 3.21
 - ☐ 3. 4.12
 - ☐ 4. 2.45

Question ID : 264330121735

Status : Marked For Review

Chosen Option : 4

Q.8 Suresh, Dinesh and Ramesh became partners in a business by investing money in the ratio of 3 : 6 : 8. If their investments is increased by 5%, 15% and 20%, respectively, then what will be the ratio of their profits for one year?

- Ans
- ☐ 1. 7:46:64
 - ☐ 2. 19:46:64
 - ☒ 3. 21:46:64
 - ☐ 4. 35:46:64

Question ID : 264330121716
Status : Answered
Chosen Option : 3

Q.9 The ratio of marks obtained by Rajesh, Rakesh and Ramesh in an exam is 2 : 4 : 9. What are the marks obtained by Rakesh and Ramesh, if Rajesh scored 30 marks in the exam?

- Ans
- ☐ 1. Rakesh = 40, Ramesh = 90
 - ☒ 2. Rakesh = 60, Ramesh = 135
 - ☐ 3. Rakesh = 120, Ramesh = 180
 - ☐ 4. Rakesh = 90, Ramesh = 40

Question ID : 26433058140
Status : Answered
Chosen Option : 2

Q.10 The average of 20 numbers is 32. If two numbers are 29 and 31, then what is the average of the remaining numbers (correct up to two decimals)?

- Ans
- ☐ 1. 31.24
 - ☐ 2. 30.22
 - ☐ 3. 34.44
 - ☒ 4. 32.22

Question ID : 26433073076
Status : Answered
Chosen Option : 4

Q.11 The angle of elevation of the top of a building at a distance of 70 m from its foot on a horizontal plane is found to be 60° . Find the height of the building.

- Ans
- ☒ 1. $70\sqrt{3}$ m
 - ☐ 2. $60\sqrt{3}$ m
 - ☐ 3. $50\sqrt{3}$ m
 - ☐ 4. $70\sqrt{2}$ m

Question ID : 264330126425
Status : Answered
Chosen Option : 1

Q.12 ABCD is a cyclic quadrilateral and BC is a diameter of the related circle on which A and D also lie. $\angle BCA = 19^\circ$ and $\angle CAD = 32^\circ$. What is the measure of $\angle ACD$?

- Ans**
- ☒ 1. 41°
 - ☒ 2. 38°
 - ☒ 3. 40°
 - ☒ 4. 39°

Question ID : 264330122883
Status : Answered
Chosen Option : 4

Q.13 Find the value of the given expression.

$$\sqrt{20 - \sqrt{20 - \sqrt{20 - \sqrt{20 - \dots \infty}}}}$$

- Ans**
- ☒ 1. 4
 - ☒ 2. 6
 - ☒ 3. 5
 - ☒ 4. 2

Question ID : 264330121643
Status : Answered
Chosen Option : 1

Q.14 Find the single equivalent discount for successive discounts of 12%, 18% and 25% on the marked price of a car.

- Ans**
- ☒ 1. 35.28%
 - ☒ 2. 42.65%
 - ☒ 3. 40.25%
 - ☒ 4. 45.88%

Question ID : 264330121709
Status : Answered
Chosen Option : 4

Q.15 Rewa has some hens and some goats. If the total number of animal heads is 100 and the total number of animal feet is 348, then what is the total number of goats with Rewa?

- Ans**
- ☒ 1. 76
 - ☒ 2. 74
 - ☒ 3. 55
 - ☒ 4. 80

Question ID : 264330121744
Status : Answered
Chosen Option : 2

Q.16 If the external angle of a regular polygon is 18° , then the number of diagonals in this polygon is:

- Ans
- ☒ 1. 180
 - ☒ 2. 150
 - ☒ 3. 170
 - ☒ 4. 140

Question ID : 264330121662
Status : Answered
Chosen Option : 3

Q.17 The number 2918245 is divisible by which of the following numbers?

- Ans
- ☒ 1. 3
 - ☒ 2. 11
 - ☒ 3. 12
 - ☒ 4. 9

Question ID : 264330126417
Status : Answered
Chosen Option : 2

Q.18 The average weight of three men is increased by 4 kg when one of them, whose weight is 100 kg, is replaced by another man. What is the weight of the new man?

- Ans
- ☒ 1. 107 kg
 - ☒ 2. 103 kg
 - ☒ 3. 104 kg
 - ☒ 4. 112 kg

Question ID : 26433058126
Status : Answered
Chosen Option : 4

Q.19 The median of the following data will be _____.
32, 25, 33, 27, 35, 29 and 30

- Ans
- ☒ 1. 32
 - ☒ 2. 27
 - ☒ 3. 30
 - ☒ 4. 29

Question ID : 264330126393
Status : Answered
Chosen Option : 3

Q.20 A hemispherical bowl of internal radius 18 cm is full of liquid. This liquid is to be filled in cylindrical bottles each of radius 3 cm and height 6 cm. How many bottles are required to empty the bowl?

Ans ☒ 1. 72

☐ 2. 70

☐ 3. 68

☐ 4. 66

Question ID : 264330126451

Status : Answered

Chosen Option : 1

Q.21 Find the value of given expression.

$$[76 - \{90 \div 5 \times (24 - 36 \div 3) \div 3\}]$$

Ans ☐ 1. 71.5

☐ 2. 75.5

☒ 3. 4

☐ 4. 77.5

Question ID : 264330122829

Status : Answered

Chosen Option : 3

Q.22 Products pass successively through the hands of three traders and each of them sells his goods at a profit of 30% of his cost price. If the last trader sold the products for Rs.300, then how much did the first trader pay for them?

Ans ☐ 1. Rs.330.55 (approx)

☒ 2. Rs.136.55 (approx)

☐ 3. Rs.240.55 (approx)

☐ 4. Rs.137.55 (approx)

Question ID : 26433061256

Status : Answered

Chosen Option : 2

Q.23 What is the total surface area of a pyramid whose base is a square with side 8 cm and height of the pyramid is 3 cm?

Ans ☐ 1. 169 cm²

☐ 2. 121 cm²

☒ 3. 144 cm²

☐ 4. 184 cm²

Question ID : 264330121659

Status : Answered

Chosen Option : 3

Q.24 The breadth 'b' of a room is twice its height and half of its length. Find the length of the longest diagonal of the room.

Ans

☒ 1. $\frac{\sqrt{20} b}{2}$

☒ 2. $\frac{b}{2}$

☒ 3. $\frac{\sqrt{21} b}{2}$

☒ 4. $\frac{\sqrt{19} b}{2}$

Question ID : 26433058918

Status : **Marked For Review**

Chosen Option : 3

Q.25 What is the simplified form of the expression $(1 + x)(1 + x^2)(1 + x^4)(1 + x^8)(1 - x)$?

Ans

☒ 1. $1 - x^{40}$

☒ 2. $1 - x^{32}$

☒ 3. $1 - x^{16}$

☒ 4. $1 - x^{42}$

Question ID : 26433074496

Status : **Answered**

Chosen Option : 3

Q.26 If the areas of two similar triangles are in the ratio 196 : 625, what would be the ratio of the corresponding sides?

Ans

☒ 1. 14:25

☒ 2. 13:20

☒ 3. 14:20

☒ 4. 13:25

Question ID : 264330126438

Status : **Answered**

Chosen Option : 4

Q.27 A speaks the truth 5 out of 7 times and B speaks truth 8 out of 9 times. What is the probability that they contradict each other in stating the same fact?

Ans

☐ 1. $\frac{1}{7}$

☐ 2. $\frac{1}{9}$

☐ 3. $\frac{1}{4}$

☒ 4. $\frac{1}{3}$

Question ID : 264330121653

Status : Answered

Chosen Option : 4

Q.28 There are two inlets A and B connected to a tank. A and B can fill the tank in 32 h and 28 h, respectively. If both the pipes are opened alternately for 1 h, starting with A, then in how much time (in hours, to nearest integer) will the tank be filled?

Ans

☐ 1. 22

☒ 2. 30

☐ 3. 36

☐ 4. 24

Question ID : 264330122817

Status : Marked For Review

Chosen Option : 2

Q.29 Two candidates contested an election. One of them got 64% of the votes and won by 434 votes. What was the total number of votes polled?

Ans

☒ 1. 1550

☐ 2. 1345

☐ 3. 1680

☐ 4. 1684

Question ID : 26433066299

Status : Answered

Chosen Option : 1

Q.30 From the top of an upright pole 17.75 m high, the angle of elevation of the top of an upright tower was 60° . If the tower was 57.75 m tall, how far away (in m) from the foot of the pole was the foot of the tower?

Ans

☒ 1. $40\sqrt{3}$

☒ 2. $\frac{151\sqrt{3}}{6}$

☒ 3. $\frac{77}{4}\sqrt{3}$

☒ 4. $\frac{40\sqrt{3}}{3}$

Question ID : 264330122894

Status : Answered

Chosen Option : 4

Section : Reasoning and General Intelligence

Q.1 Select the correct combination of mathematical signs to sequentially replace the * signs and balance the given equation.
 $33 * 4 * 15 * 3 * 61 = 188$

Ans ☒ 1. $+ \times \div -$

☒ 2. $\times - \div +$

☒ 3. $+ - \div \times$

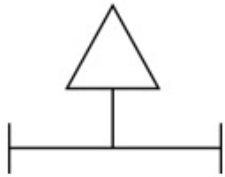
☒ 4. $\div \times - +$

Question ID : 26433068106

Status : Answered

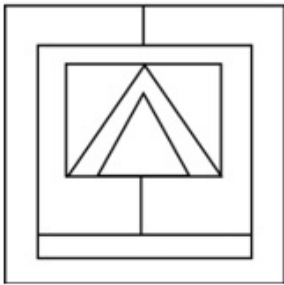
Chosen Option : 2

Q.2 Select the option in which the following figure is embedded. (Rotation is NOT allowed)

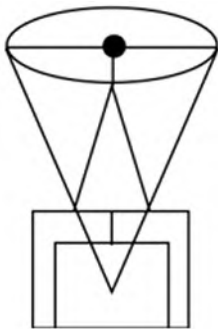


Ans

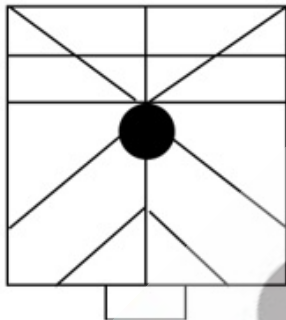
✓ 1.



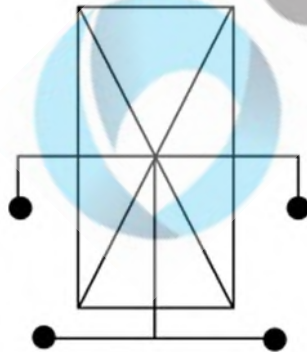
✗ 2.



✗ 3.



✗ 4.



Question ID : 264330121392
Status : Answered
Chosen Option : 1

Q.3 Select the figure from the options that can replace the question mark (?) and complete the pattern.



Ans

✗ 1.



✗ 2.



✓ 3.



✗ 4.



Question ID : 26433068221

Status : Answered

Chosen Option : 3

Q.4 A number has been denoted to each of the given letters. Select the option from the following four possible arrangements of these numbers that forms a meaningful word.
E = 1, N = 2, T = 3, S = 4, T = 5, D = 6, U = 7

Ans ✓ 1. 4,3,7,6,1,2,5

✗ 2. 2,1,4,3,6,7,5

✗ 3. 4,3,7,1,6,5,2

✗ 4. 2,1,4,6,3,5,7

Question ID : 264330121089

Status : Answered

Chosen Option : 1

Q.5 In this question, the statement is followed by two conclusions. Which of the two conclusion(s) is/are true?

Statement: $A = B \geq C \leq D > G < E < F$

Conclusions:

I. $B > F$

II. $C < A$

Ans ✗ 1. Only conclusion I is true.

✗ 2. Only conclusion II is true.

✓ 3. Neither conclusion I nor II is true.

✗ 4. Both conclusions I and II are true.

Question ID : 26433069223

Status : Answered

Chosen Option : 1

Q.6 In this question, a statement is followed by two courses of action, numbered I and II. You must assume everything in the statement to be true and on the basis of the information given in the statement, decide which course of action/s logically follows for pursuing.

Statement: There is a large increase in migration of villagers to urban areas as repeated crop failure has put them into financial problems.

Course of action:

I. The villagers should be provided with an alternate source of income in their villages which will make them stay there only.

II. To ensure their survival, the migrated villagers should be given access to all housing options in urban areas.

- Ans**
- ☒ 1. Only II follows
 - ☒ 2. Both I and II follow
 - ☒ 3. Neither I nor II follows
 - ☒ 4. Only I follows

Question ID : 264330123208

Status : Answered

Chosen Option : 4

Q.7 A question is given, followed by two statements numbered (I) and (II). You have to decide whether the data provided in the statements is sufficient to answer the question. Read both the statements and select the appropriate answer.

Question: A, B, C and D are sitting around a circular table facing the centre. Who sits to the immediate right of A?

Statements:

(I) C sits to the immediate left of A; only one person sits between C and D.

(II) Only one person sits between A and B; C sits to the immediate right of B.


- Ans**
- ☒ 1. Data in statement I alone is sufficient to answer the question while data in statement II is not
 - ☒ 2. Data in either statement I alone or statement II alone is sufficient to answer the question
 - ☒ 3. Data in statements I and II together is sufficient to answer the question
 - ☒ 4. Data in statement II alone is sufficient to answer the question while data in statement I is not

Question ID : 264330121196

Status : Answered


Chosen Option : 2

Q.8 Select the figure from among the given options that can replace the question mark (?) in the following series.



Ans

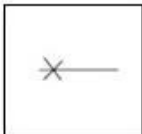
✓ 1.




✗ 2.



✗ 3.



✗ 4.



Question ID : 264330101259

Status : Answered

Chosen Option : 4

Q.9 Six friends J, K, L, M, N and O are sitting around a circular table facing the centre. N is not an immediate neighbour of M. M is sitting to the immediate left of J. J is sitting opposite to L, who is sitting to the immediate right of K. Who is sitting second to the left of L?

Ans ✗ 1. M

✗ 2. O

✗ 3. K

✓ 4. N

Question ID : 26433081999

Status : Answered

Chosen Option : 4

Q.10 Three of the following words are alike in some manner and hence form a group. Which word does NOT belong to that group? (The words must be considered as meaningful English words and must not be grouped based on the number of letters/number of consonants/vowels in the word)

Ans ✗ 1. Clarinet

✗ 2. Flute

✓ 3. Piano

✗ 4. Piccolo

Question ID : 26433065634

Status : Answered

Chosen Option : 3

Q.11 In a certain code, the word COMPAQ is written as DQNRBS and SONY is written as TQOA. In the same code, how is MOTOROLA written?

- Ans
- ☒ 1. NPUPSPMB
 - ☒ 2. INUNSNMB
 - ☒ 3. NQUQSQMC
 - ☒ 4. OPUPUPIB

Question ID : 26433078843

Status : Answered

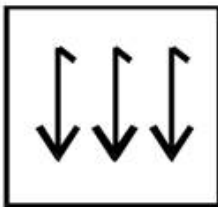
Chosen Option : 3

Q.12 Out of the following five figures, four are alike in some manner and one differs from these in that manner. Select the odd figure.

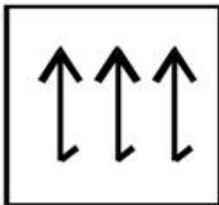


Ans

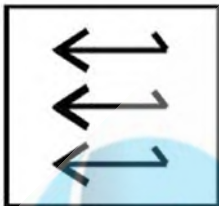
☒ 1.



☒ 2.



☒ 3.



☒ 4.



Question ID : 264330128890

Status : Answered

Chosen Option : 4

Q.13 In a certain code language, 'CROSS' is written as '66' and 'CHART' is written as '90'.
How will 'SYMBOL' be written in that language?

Ans ✓ 1. 82

✗ 2. 93

✗ 3. 76

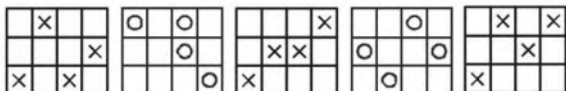
✗ 4. 88

Question ID : 264330126267

Status : Not Answered

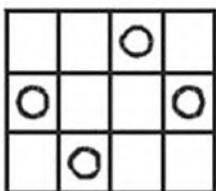
Chosen Option : --

Q.14 Out of the following five figures, four are alike in some manner and one differs from these in that manner. Select the odd figure.

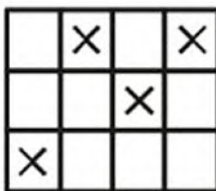


Ans

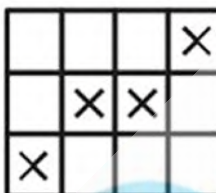
✗ 1.



✗ 2.



✗ 3.



✓ 4.



Question ID : 264330128896

Status : Answered

Chosen Option : 3

Q.15 Which of the following letter-clusters should replace # and % so that the pattern and relationship followed between the letter-cluster pair on the left side of :: is the same as that on the right side of ::?

: CLQ :: NDK : %

- Ans
- ☐ 1. # = AJS, % = MAM
 - ☒ 2. # = AOO, % = PAM
 - ☐ 3. # = EIT, % = QBN
 - ☐ 4. # = DIS, % = PBN

Question ID : 264330121406

Status : Answered

Chosen Option : 2

Q.16 In a row of people all facing north, Prince is 5th from the right end. Amit is 15th from the right end. Amit is exactly between Prince and Aditya. If Aditya is sixth from the left end of the line, how many people are there in the row?

- Ans
- ☐ 1. 29
 - ☐ 2. 31
 - ☒ 3. 30
 - ☐ 4. 32

Question ID : 264330121143

Status : Answered

Chosen Option : 3

Q.17 If + means \times , \times means \div , and \div means +, what will be the value of the following expression?
 $45 \times 9 \div 12 - 5 + 3$

- Ans
- ☐ 1. 34
 - ☐ 2. 27
 - ☐ 3. 36
 - ☒ 4. 62

Question ID : 26433076710

Status : Answered

Chosen Option : 4

Q.18 The second number in the given number-pairs is obtained by performing certain mathematical operation(s) on the first number. The same operation(s) is/are followed in all the number-pairs except one. Find that odd number-pair.

- Ans
- ☐ 1. 10 : 33
 - ☐ 2. 2 : 9
 - ☒ 3. 8 : 29
 - ☐ 4. 6 : 21

Question ID : 264330126255

Status : Answered

Chosen Option : 3

Q.19 Select the number from among the given options that can replace the question mark (?) in the following series.
189, 532, 316, ?, 377

- Ans
- ☒ 1. 384
 - ☒ 2. 291
 - ☒ 3. 441
 - ☒ 4. 405

Question ID : 26433074539

Status : Answered

Chosen Option : 3

Q.20 Three Statements are given followed by two conclusions numbered I and II. Assuming the statements to be true, even if they seem to be at variance with commonly known facts, decide which of the conclusions logically follow(s) from the statements.

Statements:

Some poems are horses.

All horses are toys.

All toys are ships.

Conclusions:

I. All toys being poems is a possibility.

II. Some horses are ships.

- Ans
- ☒ 1. Both conclusions I and II follow.
 - ☒ 2. Either conclusion I or II follows.
 - ☒ 3. Only conclusion I follows.
 - ☒ 4. Neither conclusion I nor II follows.

Question ID : 26433069186

Status : Answered

Chosen Option : 1

Q.21 'A # B' means 'A is the brother of B'.
'A @ B' means 'A is the daughter of B'.
'A & B' means 'A is the husband of B'.
'A % B' means 'A is the wife of B'.
If S % D # F @ G & H @ J,
then how is F related to H?

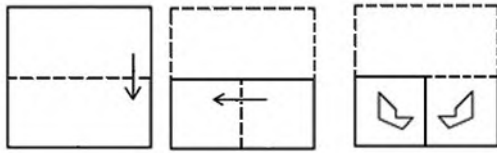
- Ans
- ☒ 1. Daughter
 - ☒ 2. Mother
 - ☒ 3. Daughter's daughter
 - ☒ 4. Son's wife

Question ID : 264330126293

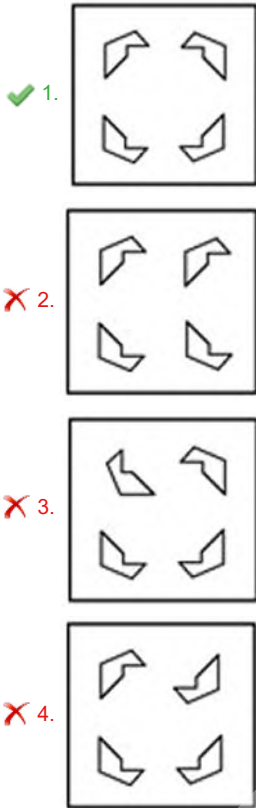
Status : Answered

Chosen Option : 1

Q.22 The sequence of folding a piece of paper and the manner in which the folded paper has been cut is shown below. Choose a figure which would most closely resemble the unfolded form of the paper.



Ans



Question ID : 264330126304

Status : Answered

Chosen Option : 1

Q.23 Select the option that represents the letters that, when placed from left to right in the following blanks, will complete the letter-series.

_ V J R W B _ _ R W B V L _ _ B V _ _ W

Ans

- ✓ 1. B V K R W M R
- ✗ 2. A V K R W M R
- ✗ 3. A W K R X N R
- ✗ 4. B W K R W M R

Question ID : 264330126277

Status : Answered

Chosen Option : 1

Q.24 Directions: A statement is given followed by two inferences I and II. You have to consider the statement to be true even if it seems to be at variance with commonly known facts. You have to decide which of the given inferences, if any, follow from the given statement.

Statement:

Extensive use of pesticides in agricultural production contaminates soil and water, remain in the crops and finally enter food chain, thereby posing threat to the human beings.

Inference:

I. Excessive use of pesticides in agricultural production is not good for people.

II. Excessive use of pesticides in agricultural production can have a bad effect on water.

- Ans**
- ☐ 1. If only II follows
 - ☐ 2. If neither I nor II follows
 - ☐ 3. If only I follows
 - ☒ 4. If both I and II follow

Question ID : 264330128901

Status : Answered

Chosen Option : 4

Q.25 In this question, two statements I and II have been given. These statements may be independent causes or effects of independent causes or a common cause. One of the statements may be the effect of the other statement. Read both statements and select the correct answer.

I. Country X reduced their crude oil import by 6% in the last 5 years.

II. The automobile industry in Country X has witnessed a sharp decline of 13% in its growth margin this year.

- Ans**
- ☒ 1. Both I and II are effects of independent causes.
 - ☐ 2. I is the cause and II is its possible effect.
 - ☐ 3. II is the cause and I is its possible effect.
 - ☐ 4. Both I and II are independent causes.

Question ID : 264330121454

Status : Answered

Chosen Option : 2

Q.26 'A # B' means 'A is the brother of B'.

'A @ B' means 'A is the daughter of B'.

'A & B' means 'A is the husband of B'.

'A % B' means 'A is the wife of B'.

If D @ N @ H & Y @ F % V, then how is V related to H?

- Ans**
- ☐ 1. Father's father
 - ☐ 2. Father
 - ☐ 3. Son-in-law
 - ☒ 4. Wife's father

Question ID : 264330126288

Status : Answered

Chosen Option : 4

Q.27 Select the set in which the numbers are related in the same way as are the numbers of the following set.

(NOTE : Operations should be performed on the whole numbers, without breaking down the numbers into its constituent digits. E.g. 13 – Operations on 13 such as adding /deleting /multiplying etc. to 13 can be performed. Breaking down 13 into 1 and 3 and then performing mathematical operations on 1 and 3 is NOT allowed)

(7, 3, 43)

(5, 2, 21)

Ans ☒ 1. (11,5,111)

☐ 2. (15,6,34)

☐ 3. (13,23,131)

☐ 4. (12,3,43)

Question ID : 264330126249

Status : Answered

Chosen Option : 1

Q.28 Select the correct mirror image of the given combination when the mirror is placed at 'PQ' as shown below.

ad2niCvh6iOvr

P
|
Q

Ans ☐ 1. rlvO!gVh6iOvr

☐ 2. ad2niCvh6iOvr

☐ 3. 9q5u!Cvhe!Ovr

☒ 4. rlvO!gVh6iOvr

Question ID : 264330126297

Status : Answered

Chosen Option : 4

Q.29 Given below is a question followed by two statements I and II. Read both statements carefully to decide which one of them is sufficient to answer the question.

Six people - A, B, C, D, E and F are sitting in a straight line facing north. Who sits to the immediate left of D?

(I) A sits second from one of the extreme ends of the line. Only two people sit between A and B. E sits to the immediate right of C.

(II) C sits third from the left end of the line. Only one person sits between C and F. E sits third to the right of F.

Ans ☐ 1. Data in statement II alone is sufficient to answer the question while data in statement I is not.

☐ 2. Data in statement I alone is sufficient to answer the question while data in statement II is not.

☒ 3. Data in statements I and II together are not sufficient to answer the question.

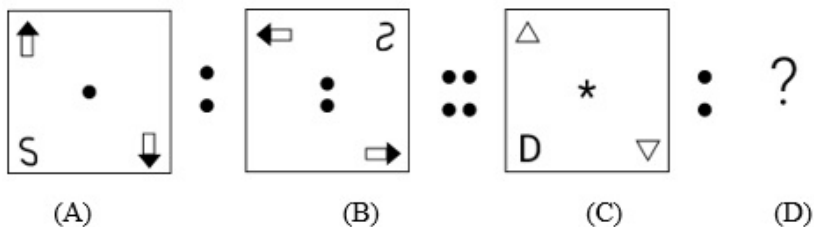
☐ 4. Data in statements I and II together are sufficient to answer the question.

Question ID : 264330121436

Status : Answered

Chosen Option : 4

Q.30 Figure A is related to B in a certain pattern. Following the same pattern, figure C is related to D. Study the pattern and select the figure which should be placed in place of D.



Ans

- ✗ 1.
- ✓ 2.
- ✗ 3.
- ✗ 4.

Question ID : 264330121472

Status : Answered

Chosen Option : 2

Section : English Language and Comprehension

Q.1 The following sentence has been split into four segments. Identify the segment that contains a grammatical error.
We should sorted out / the problem ourselves / rather than depending / on the third party.

- Ans ✗ 1. rather than depending
- ✗ 2. the problem ourselves
- ✓ 3. We should sorted out
- ✗ 4. on the third party

Question ID : 264330123921

Status : Answered

Chosen Option : 3

Q.2 Sentences of a paragraph are given below in jumbled order. Arrange the sentences in the correct order to form a meaningful and coherent paragraph.

- A. She shot the movie on the widest canvas possible using the same kind of equipment that captured Star Wars landscapes, and applied a muted colour grading to every frame.
B. She said last year that she wanted the ensemble film to look like "a faded postcard".
C. Polley lends the central conversation a visual gravitas normally reserved for epics.
D. Women Talking, adapted by the writer-director Sarah Polley from Miriam Toews's 2018 novel, is vibrant cinema.

- Ans ☒ 1. DABC
☒ 2. DBCA
☒ 3. CABD
☒ 4. DCAB

Question ID : 264330122797

Status : Answered

Chosen Option : 4

Q.3 Sentences of a paragraph are given below in jumbled order. Arrange the sentences in the correct order to form a meaningful and coherent paragraph.

- A. On the afternoon of that eventful day, I stood on the porch, dumb, expectant and guessed vaguely from my mother's signs and from the hurrying to and fro in the house that something unusual was about to happen, so I went to the door and waited on the steps.
B. I did not know what the future held of marvel or surprise for me and anger and bitterness had preyed upon me continually for weeks and a deep languor had succeeded this passionate struggle.
C. The most important day I remember in all my life is the one on which my teacher, Anne Mansfield Sullivan, came to me and I am filled with wonder when I consider the immeasurable contrasts between the two lives which it connects and it was the third of March, 1887, three months before I was seven years old.
D. The afternoon sun penetrated the mass of honeysuckle that covered the porch, and fell on my upturned face and my fingers lingered almost unconsciously on the familiar leaves and blossoms which had just come forth to greet the sweet southern spring.

- Ans ☒ 1. DABC
☒ 2. CBAD
☒ 3. CADB
☒ 4. CDAB

Question ID : 26433060488

Status : Answered

Chosen Option : 3

Q.4 Select the option that expresses the given sentence in passive voice.
The mistress appointed him monitor.

- Ans ☒ 1. Monitor had been appointed as mistress.
☒ 2. He had been appointed as monitor.
☒ 3. He was appointed monitor by the mistress.
☒ 4. He appointed mistress as monitor.

Question ID : 264330123919

Status : Answered

Chosen Option : 3

Q.5 Given below are four jumbled sentences. Select the option that gives their correct logical sequence.

- A. When faced with uncertainty, humans look out for the action of others and become a victim of ineffective rational thinking during compelling, confusing situations.
- B. According to him, in an emergency, we tend to forget that everybody else observing the event is also likely to be looking out for social evidence.
- C. Robert B. Cialdini explains this reaction with a psychological phenomenon called 'pluralistic ignorance'.
- D. Since we all prefer to appear poised and unflustered among others, we are likely to search for answers placidly, with brief, camouflaged glances at those around us.

Ans ☒ 1. ACBD

☒ 2. BCDA

☒ 3. ABCD

☒ 4. ABDC

Question ID : 264330120998

Status : Answered

Chosen Option : 1

Q.6 Select the most appropriate meaning of the highlighted idiom.

The team members **seem to be** running around in circles.

Ans ☒ 1. To be extremely successful

☒ 2. Hardly any time to breathe

☒ 3. To be very active but with few results

☒ 4. Very dynamic and hardworking

Question ID : 264330120745

Status : Answered

Chosen Option : 3

Q.7 Select the option that expresses the given sentence in active voice.

The canons are being fired continuously by them.

Ans ☒ 1. They fired canons continuously.

☒ 2. They are firing the canons continuously.

☒ 3. They have fired the canons continuously.

☒ 4. The canons fire continuously.

Question ID : 26433058535

Status : Answered

Chosen Option : 2

Q.8 Select the most appropriate option to fill in the blank.

Many students do not _____ attention in botany class.

Ans ☒ 1. exhibit

☒ 2. drive

☒ 3. pay

☒ 4. trace

Question ID : 26433058505

Status : Answered

Chosen Option : 3

Q.9 Identify the option that arranges the given parts in the correct order to form a meaningful paragraph.

- A. Then a nurse and a doctor came
- B. After the terrible accident
- C. A car took Raman to the hospital
- D. The two men carried him to a bed and put him in it carefully

Ans ☒ 1. DCBA
☒ 2. ABCD
☒ 3. BCDA
☒ 4. ACDB

Question ID : 26433072688
Status : Answered
Chosen Option : 3

Q.10 Select the option that expresses the given sentence in passive voice.
Marvel Comics created Superman.

Ans ☒ 1. Superman was created by Marvel Comics.
☒ 2. Superman was created.
☒ 3. Superman is created by Marvel Comics.
☒ 4. Marvel Comics is creating Superman.

Question ID : 26433059192
Status : Answered
Chosen Option : 1

Q.11 Select the most appropriate option to fill in the blank.

Tia wanted a dog that was _____ than Larry's dog.

Ans ☒ 1. smarty and strong
☒ 2. smartest and strongest
☒ 3. smarter and stronger
☒ 4. smart and strong

Question ID : 26433061503
Status : Answered
Chosen Option : 3

Q.12 Select the most appropriate ANTONYM of the underlined word.

The reputed officer was removed from his post as he was having a clandestine affair.

Ans ☒ 1. Surreptitious
☒ 2. Overt
☒ 3. Amorous
☒ 4. Casual

Question ID : 26433070538
Status : Answered
Chosen Option : 2

Q.13 Select the most appropriate meaning of the highlighted idiom.

It was a Catch 22 situation for the manager.

- Ans ☐ 1. Worthy successor to the throne
- ☒ 2. A difficult situation in which the solution to a problem is impossible
- ☐ 3. Hailed as the ultimate champion
- ☐ 4. A positive outcome in a tough situation

Question ID : 264330120742

Status : Answered

Chosen Option : 2

Q.14 Select the sentence that contains no spelling errors.

- Ans ☐ 1. The granduor of the ancient Roman Empire is visible in many monuments in Italy and Greece.
- ☐ 2. The grandour of the ancient Roman Empire is visible in many monumants in Italy and Greece.
- ☒ 3. The grandeur of the ancient Roman Empire is visible in many monuments in Italy and Greece.
- ☐ 4. The granduer of the ancient Roman Empire is visible in many monuments in Italy and Greece.

Question ID : 26433070689

Status : Answered

Chosen Option : 3

Q.15 Select the most appropriate synonym of the word given in brackets to fill in the blank.

The doctor has _____ (advised) medicine for the treatment of the disease.

- Ans ☐ 1. prevented
- ☐ 2. proscribed
- ☐ 3. presented
- ☒ 4. prescribed

Question ID : 264330123047

Status : Answered

Chosen Option : 4

Q.16 Sentences of a paragraph are given below in jumbled order. Arrange the sentences in the correct order to form a meaningful and coherent paragraph.

- A.The temperature of the world has increased, resulting in global warming.
- B.The melting of the ice caps will increase the sea level, thereby drowning many islands and coastal regions.
- C.The increased amount of carbon emission is considered as the reason behind global warming.
- D.The increase in the global temperature is melting the polar ice caps.

- Ans ☐ 1. ABCD
- ☐ 2. ACBD
- ☒ 3. ACDB
- ☐ 4. BADC

Question ID : 26433072379

Status : Answered

Chosen Option : 3

Q.17 Select the most appropriate ANTONYM of the underlined word.

The placid conversation between the two cricketers on a TV show aroused much controversy.

- Ans
- ☐ 1. Sardonic
 - ☐ 2. Inappropriate
 - ☐ 3. Informal
 - ☒ 4. Angry

Question ID : 26433070533
Status : Answered
Chosen Option : 4

Q.18 Sentences of a paragraph are given below in jumbled order. Arrange the sentences in the correct order to form a meaningful and coherent paragraph.

- A.Road accidents have become very common in India.
B.Condition of roads in India is pathetic.
C.Increasing number of vehicles leave little space on roads.
D.Roads are narrow and remain congested most of the time.

- Ans
- ☐ 1. ACBD
 - ☒ 2. BDCA
 - ☐ 3. BCDA
 - ☐ 4. CDBA

Question ID : 26433070564
Status : Answered
Chosen Option : 2

Q.19 Select the INCORRECTLY spelt word.

- Ans
- ☐ 1. Greave
 - ☐ 2. Groan
 - ☒ 3. Guarentee
 - ☐ 4. Gravely

Question ID : 26433060478
Status : Answered
Chosen Option : 3

Q.20 Select the option that expresses the given sentence in indirect speech.

“So help me heaven!”, the man cried, “I shall never lie again.”

- Ans
- ☐ 1. The man cries out to heaven to help him not to lie again ever.
 - ☒ 2. The man called upon heaven to witness his resolve that he would never lie again.
 - ☐ 3. The man requested heaven to help him and see that he lie again.
 - ☐ 4. The man called heaven and ordered to help him and see to it that she never lies again.

Question ID : 26433065171
Status : Answered
Chosen Option : 2

Q.21 Identify the pair of synonyms from the underlined words in the given sentence.
It was a fairly foul day , as omens could be seen in abundance from the threshold of his border town ever since the dawn struck.

- Ans
- ☒ 1. fairly, abundance
 - ☒ 2. foul, omens
 - ☒ 3. day, border
 - ☒ 4. threshold, dawn

Question ID : 264330121033
Status : Answered
Chosen Option : 2

Q.22 The following sentence has been divided into parts. One of them may contain an error.
Select the part that contains the error from the given options. If you don't find any error, mark 'No error' as your answer.

Dan needed help / to get the / tight coat of him.

- Ans
- ☒ 1. No error
 - ☒ 2. Dan needed help
 - ☒ 3. to get the
 - ☒ 4. tight coat of him

Question ID : 26433061474
Status : Answered
Chosen Option : 4

Q.23 Select the most appropriate option to fill in the blank.
The management wants to _____ restrictions at the workplace.

- Ans
- ☒ 1. break
 - ☒ 2. impose
 - ☒ 3. settle
 - ☒ 4. encourage

Question ID : 26433058503
Status : Answered
Chosen Option : 2

Q.24 Select the most appropriate option to replace the underlined word in the given sentence.
Hritik is slow than Heer.

- Ans
- ☒ 1. slowliest
 - ☒ 2. much slow
 - ☒ 3. slower
 - ☒ 4. slowest

Question ID : 26433059000
Status : Answered
Chosen Option : 3

Q.25 Select the option that expresses the given sentence in direct speech.
Hira inquired how I was doing being all alone in my house.

- Ans ☒ 1. Hira said to me, "Are you doing fine being all alone in your house."
☒ 2. Hira said to me, "How are you doing being all alone in my house."
☒ 3. Hira said to me, "How are you doing being all alone in your house?"
☒ 4. Hira said to me, "How you are doing being all alone in your house?"

Question ID : 26433059502
Status : Answered
Chosen Option : 3

Q.26 Select the correct homonym from the given options to fill in the blank.
The wind _____ so powerfully that the door closed.

- Ans ☒ 1. blow
☒ 2. blew
☒ 3. blues
☒ 4. blue

Question ID : 264330120789
Status : Answered
Chosen Option : 2

Q.27 Select the option that can be used as a one-word substitute for the given group of words.

Photographers who follow celebrities to get their pictures to sell them

- Ans ☒ 1. Paparazzi
☒ 2. Reporter
☒ 3. Editor
☒ 4. Interviewer

Question ID : 26433072322
Status : Answered
Chosen Option : 1

Q.28 Select the option that can be used as a one-word substitute for the given group of words.

Someone who is reserved and shy.

- Ans ☒ 1. Introvert
☒ 2. Extrovert
☒ 3. Chauffeur
☒ 4. Talkative

Question ID : 26433060823
Status : Answered
Chosen Option : 1

Q.29 Select the option that expresses the given sentence in reported speech.

Joey said to the girl, "How are you doing?"

- Ans
- ☒ 1. Joey asked the girl if she was doing fine.
 - ☒ 2. Joey asked the girl how was she doing.
 - ☒ 3. Joey asked the girl that how was she doing.
 - ☒ 4. Joey asked the girl how she was doing.

Question ID : 26433059497

Status : Answered

Chosen Option : 4

Comprehension:

In the following passage, some words have been deleted. Read the passage carefully and select the most appropriate option to fill in each blank.

The effects of plastic bags on the environment are really (1)_____ devastating because there is no disposal method that will really help eliminate the problem. The biggest problem with them is that once they have been (2)_____, they end up in the trash, which then ends up in the landfill or is burned. The indefinite period of time that it takes for the average plastic bag to break (3)_____ can be literally hundreds of years. Throughout the world, plastic bags are responsible for suffocation and deaths of woodland animals as well as (4)_____ soil nutrients. The land litter that is made up of plastic bags has the potential to kill over and over again. It has been estimated that one bag has the potential to inadvertently kill one animal per every three months due to unintentional digestion or inhalation. There are always alternatives to plastic bags and the search for more alternatives continues.

SubQuestion No : 30

Q.30 Select the most appropriate option to fill in blank number 1.

- Ans
- ☒ 1. vaguely
 - ☒ 2. randomly
 - ☒ 3. quite
 - ☒ 4. seldom

Question ID : 264330128955

Status : Answered

Chosen Option : 3

Comprehension:

In the following passage, some words have been deleted. Read the passage carefully and select the most appropriate option to fill in each blank.

The effects of plastic bags on the environment are really (1)_____ devastating because there is no disposal method that will really help eliminate the problem. The biggest problem with them is that once they have been (2)_____, they end up in the trash, which then ends up in the landfill or is burned. The indefinite period of time that it takes for the average plastic bag to break (3)_____ can be literally hundreds of years. Throughout the world, plastic bags are responsible for suffocation and deaths of woodland animals as well as (4)_____ soil nutrients. The land litter that is made up of plastic bags has the potential to kill over and over again. It has been estimated that one bag has the potential to inadvertently kill one animal per every three months due to unintentional digestion or inhalation. There are always alternatives to plastic bags and the search for more alternatives continues.

SubQuestion No : 31

Q.31 Select the most appropriate option to fill in blank number 2.

- Ans
- ☒ 1. disinfected
 - ☒ 2. soiled
 - ☒ 3. moulded
 - ☒ 4. recycled

Question ID : 264330128956

Status : Answered

Chosen Option : 2

Comprehension:

In the following passage, some words have been deleted. Read the passage carefully and select the most appropriate option to fill in each blank.

The effects of plastic bags on the environment are really (1)_____ devastating because there is no disposal method that will really help eliminate the problem. The biggest problem with them is that once they have been (2)_____, they end up in the trash, which then ends up in the landfill or is burned. The indefinite period of time that it takes for the average plastic bag to break (3)_____ can be literally hundreds of years. Throughout the world, plastic bags are responsible for suffocation and deaths of woodland animals as well as (4)_____ soil nutrients. The land litter that is made up of plastic bags has the potential to kill over and over again. It has been estimated that one bag has the potential to inadvertently kill one animal per every three months due to unintentional digestion or inhalation. There are always alternatives to plastic bags and the search for more alternatives continues.

SubQuestion No : 32

Q.32 Select the most appropriate option to fill in blank number 3.

- Ans
- ☒ 1. through
 - ☒ 2. out
 - ☒ 3. down
 - ☒ 4. even

Question ID : 264330128957

Status : Answered

Chosen Option : 3

Comprehension:

In the following passage, some words have been deleted. Read the passage carefully and select the most appropriate option to fill in each blank.

The effects of plastic bags on the environment are really (1)_____ devastating because there is no disposal method that will really help eliminate the problem. The biggest problem with them is that once they have been (2)_____, they end up in the trash, which then ends up in the landfill or is burned. The indefinite period of time that it takes for the average plastic bag to break (3)_____ can be literally hundreds of years. Throughout the world, plastic bags are responsible for suffocation and deaths of woodland animals as well as (4)_____ soil nutrients. The land litter that is made up of plastic bags has the potential to kill over and over again. It has been estimated that one bag has the potential to inadvertently kill one animal per every three months due to unintentional digestion or inhalation. There are always alternatives to plastic bags and the search for more alternatives continues.

SubQuestion No : 33

Q.33 Select the most appropriate option to fill in blank number 4.

- Ans
- ☒ 1. accumulating
 - ☒ 2. inhibiting
 - ☒ 3. demanding
 - ☒ 4. converting

Question ID : 264330128958

Status : Answered

Chosen Option : 2

Comprehension:

Read the following passage and answer the questions given after it.

Amidst a maze of rocks tucked in the Aravalli mountain ranges of Haryana, a team of archaeologists discovered cave paintings they believe belong to the Upper Palaeolithic age. The cave paintings have been discovered just outside the national capital and a stone's throw away from a holy grove called Mangar Bani- the region's only surviving patch of primary forest.

While the residents of the villages have been familiar with the paintings for ages, the Haryana government's museum and archaeology department took note of them just recently.

A fact-finding team was sent to the area in the last week of June. The team came across cave paintings comprising images of human figurines, animals, foliage, and geometric drawings.

While some have faded over time, others are still very visible. They also discovered rock art and open-air ceremonial sites.

Banani Bhattacharyya, deputy director of the department of archaeology and museums informed, "So far, cave paintings in Delhi-NCR have only been found here. The paintings are yet to be dated but at least some of them belong to the Upper Palaeolithic period in all likelihood. We are viewing the paintings in continuation with the Soanian culture which has been found in Shivalik hills, Narmada and Aravallis."

Most of the cave paintings found were in ochre colour, but some were in white. As per experts, cave paintings in white are usually from a later stage (early contemporary era), while Stone Age paintings are more often than not in ochre. "Stone age paintings generally use red and ochre colours. Stones of these colour used to be available locally and inhabitants crushed the stones for preparing the colour for paintings," added Bhattacharyya.

The Upper Paleolithic Age began around 40,000 years ago and lasted till around 10,000 years ago. While yet to be established through archaeological dating, Bhattacharyya says the Mangar cave art is 20,000-40,000 years old. Bhattacharyya claimed that the discovery is extremely significant. "Starting from the Lower Palaeolithic to Middle Palaeolithic then Upper Palaeolithic, we see the evolution here. We have found significant remains from Lower Palaeolithic till Middle and Upper Palaeolithic period too," she explained. "Though tools from the Palaeolithic Age have been identified earlier in parts of the Aravallis, it is for the first time that cave paintings and rock art of a large magnitude have been found in Haryana," she added.

SubQuestion No : 34

Q.34 The cave paintings found in Aravalli hills are significant mainly because

- Ans**
- ☐ 1. they are the only prehistoric cave paintings found in Aravalli Hills.
 - ☐ 2. they are found in such a large magnitude for the first time.
 - ☐ 3. they have been discovered just outside the national capital, Delhi
 - ☒ 4. they depict the evolution from Lower to Upper Paleolithic period.

Question ID : 264330128810

Status : Answered

Chosen Option : 4

Comprehension:

Read the following passage and answer the questions given after it.

Amidst a maze of rocks tucked in the Aravalli mountain ranges of Haryana, a team of archaeologists discovered cave paintings they believe belong to the Upper Palaeolithic age. The cave paintings have been discovered just outside the national capital and a stone's throw away from a holy grove called Mangar Bani- the region's only surviving patch of primary forest.

While the residents of the villages have been familiar with the paintings for ages, the Haryana government's museum and archaeology department took note of them just recently.

A fact-finding team was sent to the area in the last week of June. The team came across cave paintings comprising images of human figurines, animals, foliage, and geometric drawings.

While some have faded over time, others are still very visible. They also discovered rock art and open-air ceremonial sites.

Banani Bhattacharyya, deputy director of the department of archaeology and museums informed, "So far, cave paintings in Delhi-NCR have only been found here. The paintings are yet to be dated but at least some of them belong to the Upper Palaeolithic period in all likelihood. We are viewing the paintings in continuation with the Soanian culture which has been found in Shivalik hills, Narmada and Aravallis."

Most of the cave paintings found were in ochre colour, but some were in white. As per experts, cave paintings in white are usually from a later stage (early contemporary era), while Stone Age paintings are more often than not in ochre. "Stone age paintings generally use red and ochre colours. Stones of these colour used to be available locally and inhabitants crushed the stones for preparing the colour for paintings," added Bhattacharyya.

The Upper Paleolithic Age began around 40,000 years ago and lasted till around 10,000 years ago. While yet to be established through archaeological dating, Bhattacharyya says the Mangar cave art is 20,000-40,000 years old. Bhattacharyya claimed that the discovery is extremely significant. "Starting from the Lower Palaeolithic to Middle Palaeolithic then Upper Palaeolithic, we see the evolution here. We have found significant remains from Lower Palaeolithic till Middle and Upper Palaeolithic period too," she explained. "Though tools from the Palaeolithic Age have been identified earlier in parts of the Aravallis, it is for the first time that cave paintings and rock art of a large magnitude have been found in Haryana," she added.

SubQuestion No : 35

Q.35 Most of the cave paintings found in Mangar forest area in Haryana are in which colour?

- Ans
- ☒ 1. black
 - ☒ 2. white
 - ☒ 3. red
 - ☒ 4. ochre

Question ID : 264330128811

Status : Answered

Chosen Option : 4

Comprehension:

Read the following passage and answer the questions given after it.

Amidst a maze of rocks tucked in the Aravalli mountain ranges of Haryana, a team of archaeologists discovered cave paintings they believe belong to the Upper Palaeolithic age. The cave paintings have been discovered just outside the national capital and a stone's throw away from a holy grove called Mangar Bani- the region's only surviving patch of primary forest.

While the residents of the villages have been familiar with the paintings for ages, the Haryana government's museum and archaeology department took note of them just recently.

A fact-finding team was sent to the area in the last week of June. The team came across cave paintings comprising images of human figurines, animals, foliage, and geometric drawings.

While some have faded over time, others are still very visible. They also discovered rock art and open-air ceremonial sites.

Banani Bhattacharyya, deputy director of the department of archaeology and museums informed, "So far, cave paintings in Delhi-NCR have only been found here. The paintings are yet to be dated but at least some of them belong to the Upper Palaeolithic period in all likelihood. We are viewing the paintings in continuation with the Soanian culture which has been found in Shivalik hills, Narmada and Aravallis."

Most of the cave paintings found were in ochre colour, but some were in white. As per experts, cave paintings in white are usually from a later stage (early contemporary era), while Stone Age paintings are more often than not in ochre. "Stone age paintings generally use red and ochre colours. Stones of these colour used to be available locally and inhabitants crushed the stones for preparing the colour for paintings," added Bhattacharyya.

The Upper Paleolithic Age began around 40,000 years ago and lasted till around 10,000 years ago. While yet to be established through archaeological dating, Bhattacharyya says the Mangar cave art is 20,000-40,000 years old. Bhattacharyya claimed that the discovery is extremely significant. "Starting from the Lower Palaeolithic to Middle Palaeolithic then Upper Palaeolithic, we see the evolution here. We have found significant remains from Lower Palaeolithic till Middle and Upper Palaeolithic period too," she explained. "Though tools from the Palaeolithic Age have been identified earlier in parts of the Aravallis, it is for the first time that cave paintings and rock art of a large magnitude have been found in Haryana," she added.

SubQuestion No : 36

Q.36 Which of the following statement is NOT correct according to the passage?

- Ans**
- ☒ 1. The cave men crushed the locally available stones for preparing the colour for paintings.
 - ☒ 2. The paintings comprise images of human figurines, animals, foliage, and geometric drawings.
 - ☒ 3. The Mangar cave art is 20,000-40,000 years old.
 - ☒ 4. The paintings in red belong to early contemporary era.

Question ID : 264330128813

Status : Answered

Chosen Option : 4

Comprehension:

Read the following passage and answer the questions given after it.

Amidst a maze of rocks tucked in the Aravalli mountain ranges of Haryana, a team of archaeologists discovered cave paintings they believe belong to the Upper Palaeolithic age. The cave paintings have been discovered just outside the national capital and a stone's throw away from a holy grove called Mangar Bani- the region's only surviving patch of primary forest.

While the residents of the villages have been familiar with the paintings for ages, the Haryana government's museum and archaeology department took note of them just recently.

A fact-finding team was sent to the area in the last week of June. The team came across cave paintings comprising images of human figurines, animals, foliage, and geometric drawings.

While some have faded over time, others are still very visible. They also discovered rock art and open-air ceremonial sites.

Banani Bhattacharyya, deputy director of the department of archaeology and museums informed, "So far, cave paintings in Delhi-NCR have only been found here. The paintings are yet to be dated but at least some of them belong to the Upper Palaeolithic period in all likelihood. We are viewing the paintings in continuation with the Soanian culture which has been found in Shivalik hills, Narmada and Aravallis."

Most of the cave paintings found were in ochre colour, but some were in white. As per experts, cave paintings in white are usually from a later stage (early contemporary era), while Stone Age paintings are more often than not in ochre. "Stone age paintings generally use red and ochre colours. Stones of these colour used to be available locally and inhabitants crushed the stones for preparing the colour for paintings," added Bhattacharyya.

The Upper Paleolithic Age began around 40,000 years ago and lasted till around 10,000 years ago. While yet to be established through archaeological dating, Bhattacharyya says the Mangar cave art is 20,000-40,000 years old. Bhattacharyya claimed that the discovery is extremely significant. "Starting from the Lower Palaeolithic to Middle Palaeolithic then Upper Palaeolithic, we see the evolution here. We have found significant remains from Lower Palaeolithic till Middle and Upper Palaeolithic period too," she explained. "Though tools from the Palaeolithic Age have been identified earlier in parts of the Aravallis, it is for the first time that cave paintings and rock art of a large magnitude have been found in Haryana," she added.

SubQuestion No : 37

Q.37 The archaeological findings in the Mangar Forest consist of all the following except

Ans

- ✓ 1. tools
- ✗ 2. ceremonial sites
- ✗ 3. cave paintings
- ✗ 4. rock art

Question ID : 264330128812

Status : Answered

Chosen Option : 1

Comprehension:

Read the following passage and answer the questions given after it.

Total area sown under Rabi crops has increased by 3.25% from 697.98 lakh hectares in 2021-22 to 720.68 lakh hectares in 2022-23. This is 22.71 lakh hectares more this year compared to corresponding period of 2021-22. Comparing with normal sown area (average of the last five years), the increase is to the tune of 13.71% from 633.80 to 720.68 lakh hectares. The increase in area is across all crops, - highest being in rice. Out of 22.71 lakh hectares increase in all Rabi crops, increase in rice area is 11.20 lakh hectares from 35.05 lakh hectares in 2021-22 to 46.25 lakh hectares in 2022-23. However, this is lower than normal sown area of 47.71 lakh hectares. Maximum increase in area under rice is in states of Telangana and West Bengal.

Area under oilseeds increased by 7.31% from 102.36 lakh hectares during 2021-22 to 109.84 lakh hectares this year. The increase in area under oilseeds at the rate of 7.31% is more than double the rate of increase of 3.25% in all crops together. Rajasthan, Madhya Pradesh and Chhattisgarh accounted for major expansion in area of oilseeds.

Rapeseed & Mustard contributed maximum in increasing oilseeds area during this Rabi season. Mustard area increased by 6.77 lakh hectares from 91.25 lakh hectares in 2021-22 to 98.02 lakh hectares in 2022-23. Thus, out of 7.49 lakh hectares increase in area under oilseeds, rapeseed & mustard alone accounted for 6.44 lakh hectares.

Pulse production is being focused to make country self-sufficient in these commodities. Area under pulses increased by 0.56 lakh hectares from 167.31 to 167.86 lakh hectares. Mung bean and lentil accounted for increase in area under pulses.

The United Nations General Assembly has declared the year 2023 as the International Year of Millets and India is at the forefront in celebrating the event in a big way. In order to create awareness about the benefits of millets as superfood and to meet its growing demand around the world, the Government is promoting millet production through the NFSM-Nutri Cereals component of National Food Security Mission programme in 212 districts of 14 states. Coarse cum Nutri-cereals saw an increase of 2.08 lakh hectares in area under cultivation from 51.42 lakh hectares in 2021-22 to 53.49 lakh hectares in 2022-23.

SubQuestion No : 38

Q.38 Match the following crops with the area.

Crop area in 2022-23

a. millets 1. 98.02 lakh hectares

b. pulses 2. 53.49 lakh hectares

c. mustard 3. 167.86 lakh hectares

Ans ☒ 1. a-1, b-3, c-2

☒ 2. a -3, b -1, c-2

☒ 3. a-2, b-1, c-3

☒ 4. a-2, b-3, c-1

Question ID : 264330128828

Status : Answered

Chosen Option : 4

Comprehension:

Read the following passage and answer the questions given after it.

Total area sown under Rabi crops has increased by 3.25% from 697.98 lakh hectares in 2021-22 to 720.68 lakh hectares in 2022-23. This is 22.71 lakh hectares more this year compared to corresponding period of 2021-22. Comparing with normal sown area (average of the last five years), the increase is to the tune of 13.71% from 633.80 to 720.68 lakh hectares. The increase in area is across all crops, - highest being in rice. Out of 22.71 lakh hectares increase in all Rabi crops, increase in rice area is 11.20 lakh hectares from 35.05 lakh hectares in 2021-22 to 46.25 lakh hectares in 2022-23. However, this is lower than normal sown area of 47.71 lakh hectares. Maximum increase in area under rice is in states of Telangana and West Bengal.

Area under oilseeds increased by 7.31% from 102.36 lakh hectares during 2021-22 to 109.84 lakh hectares this year. The increase in area under oilseeds at the rate of 7.31% is more than double the rate of increase of 3.25% in all crops together. Rajasthan, Madhya Pradesh and Chhattisgarh accounted for major expansion in area of oilseeds.

Rapeseed & Mustard contributed maximum in increasing oilseeds area during this Rabi season. Mustard area increased by 6.77 lakh hectares from 91.25 lakh hectares in 2021-22 to 98.02 lakh hectares in 2022-23. Thus, out of 7.49 lakh hectares increase in area under oilseeds, rapeseed & mustard alone accounted for 6.44 lakh hectares.

Pulse production is being focused to make country self-sufficient in these commodities. Area under pulses increased by 0.56 lakh hectares from 167.31 to 167.86 lakh hectares. Mung bean and lentil accounted for increase in area under pulses.

The United Nations General Assembly has declared the year 2023 as the International Year of Millets and India is at the forefront in celebrating the event in a big way. In order to create awareness about the benefits of millets as superfood and to meet its growing demand around the world, the Government is promoting millet production through the NFSM-Nutri Cereals component of National Food Security Mission programme in 212 districts of 14 states. Coarse cum Nutri-cereals saw an increase of 2.08 lakh hectares in area under cultivation from 51.42 lakh hectares in 2021-22 to 53.49 lakh hectares in 2022-23.

SubQuestion No : 39

Q.39 On which of the following crops, is the Indian Government specially focussing this year?

Ans

- ☒ 1. rice
- ☒ 2. oilseeds
- ☒ 3. pulses
- ☒ 4. millets

Question ID : 264330128827

Status : Answered

Chosen Option : 4

Comprehension:

Read the following passage and answer the questions given after it.

Total area sown under Rabi crops has increased by 3.25% from 697.98 lakh hectares in 2021-22 to 720.68 lakh hectares in 2022-23. This is 22.71 lakh hectares more this year compared to corresponding period of 2021-22. Comparing with normal sown area (average of the last five years), the increase is to the tune of 13.71% from 633.80 to 720.68 lakh hectares. The increase in area is across all crops, - highest being in rice. Out of 22.71 lakh hectares increase in all Rabi crops, increase in rice area is 11.20 lakh hectares from 35.05 lakh hectares in 2021-22 to 46.25 lakh hectares in 2022-23. However, this is lower than normal sown area of 47.71 lakh hectares. Maximum increase in area under rice is in states of Telangana and West Bengal.

Area under oilseeds increased by 7.31% from 102.36 lakh hectares during 2021-22 to 109.84 lakh hectares this year. The increase in area under oilseeds at the rate of 7.31% is more than double the rate of increase of 3.25% in all crops together. Rajasthan, Madhya Pradesh and Chhattisgarh accounted for major expansion in area of oilseeds.

Rapeseed & Mustard contributed maximum in increasing oilseeds area during this Rabi season. Mustard area increased by 6.77 lakh hectares from 91.25 lakh hectares in 2021-22 to 98.02 lakh hectares in 2022-23. Thus, out of 7.49 lakh hectares increase in area under oilseeds, rapeseed & mustard alone accounted for 6.44 lakh hectares.

Pulse production is being focused to make country self-sufficient in these commodities. Area under pulses increased by 0.56 lakh hectares from 167.31 to 167.86 lakh hectares. Mung bean and lentil accounted for increase in area under pulses.

The United Nations General Assembly has declared the year 2023 as the International Year of Millets and India is at the forefront in celebrating the event in a big way. In order to create awareness about the benefits of millets as superfood and to meet its growing demand around the world, the Government is promoting millet production through the NFSM-Nutri Cereals component of National Food Security Mission programme in 212 districts of 14 states. Coarse cum Nutri-cereals saw an increase of 2.08 lakh hectares in area under cultivation from 51.42 lakh hectares in 2021-22 to 53.49 lakh hectares in 2022-23.

SubQuestion No : 40

Q.40 The main theme of the passage is

- Ans** ☒ 1. increase in the area of Rabi crops in 2022-23
- ☐ 2. area under rabi crop in last five years
- ☐ 3. increase in the production of pulses
- ☐ 4. increase in the area of oilseeds like mustard

Question ID : 264330128825

Status : Answered

Chosen Option : 1

Comprehension:

Read the following passage and answer the questions given after it.

Total area sown under Rabi crops has increased by 3.25% from 697.98 lakh hectares in 2021-22 to 720.68 lakh hectares in 2022-23. This is 22.71 lakh hectares more this year compared to corresponding period of 2021-22. Comparing with normal sown area (average of the last five years), the increase is to the tune of 13.71% from 633.80 to 720.68 lakh hectares. The increase in area is across all crops, - highest being in rice. Out of 22.71 lakh hectares increase in all Rabi crops, increase in rice area is 11.20 lakh hectares from 35.05 lakh hectares in 2021-22 to 46.25 lakh hectares in 2022-23. However, this is lower than normal sown area of 47.71 lakh hectares. Maximum increase in area under rice is in states of Telangana and West Bengal.

Area under oilseeds increased by 7.31% from 102.36 lakh hectares during 2021-22 to 109.84 lakh hectares this year. The increase in area under oilseeds at the rate of 7.31% is more than double the rate of increase of 3.25% in all crops together. Rajasthan, Madhya Pradesh and Chhattisgarh accounted for major expansion in area of oilseeds.

Rapeseed & Mustard contributed maximum in increasing oilseeds area during this Rabi season. Mustard area increased by 6.77 lakh hectares from 91.25 lakh hectares in 2021-22 to 98.02 lakh hectares in 2022-23. Thus, out of 7.49 lakh hectares increase in area under oilseeds, rapeseed & mustard alone accounted for 6.44 lakh hectares.

Pulse production is being focused to make country self-sufficient in these commodities. Area under pulses increased by 0.56 lakh hectares from 167.31 to 167.86 lakh hectares. Mung bean and lentil accounted for increase in area under pulses.

The United Nations General Assembly has declared the year 2023 as the International Year of Millets and India is at the forefront in celebrating the event in a big way. In order to create awareness about the benefits of millets as superfood and to meet its growing demand around the world, the Government is promoting millet production through the NFSM-Nutri Cereals component of National Food Security Mission programme in 212 districts of 14 states. Coarse cum Nutri-cereals saw an increase of 2.08 lakh hectares in area under cultivation from 51.42 lakh hectares in 2021-22 to 53.49 lakh hectares in 2022-23.

SubQuestion No : 41

Q.41 Which state recorded the maximum increase in sown area of the rice crop?

- Ans ☒ 1. Chhattisgarh
☒ 2. Telangana
☒ 3. Rajasthan
☒ 4. Madhya Pradesh

Question ID : 264330128826

Status : Answered

Chosen Option : 2

Comprehension:

Read the given passage and answer the questions that follow.

My grandmother, like everybody's grandmother, was an old woman. She had been old and wrinkled for the twenty years that I had known her. People said that she once had been young and pretty and had even had a husband, but that was hard to believe. My grandfather's portrait hung above the mantelpiece in the drawing room. He wore a big turban and loose fitting clothes. His long, white beard covered the best part of his chest and he looked at least a hundred years old. He did not look the sort of person who would have a wife or children. He looked as if he could only have lots and lots of grandchildren. As my grandmother being young and pretty, the thought was almost revolting. She often told us of the games she used to play as a child. That seemed quite absurd and undignified on her part and we treated it like the fables of the Prophets she used to tell us.

SubQuestion No : 42

Q.42 Select the most appropriate fact from the given options.

- Ans ☒ 1. The author and grandma lived for twenty years.
☒ 2. Grandma was twenty years old.
☒ 3. The author was twenty when grandma died.
☒ 4. The author was twenty years old when he wrote the story.

Question ID : 264330128922

Status : Answered

Chosen Option : 4

Comprehension:

Read the given passage and answer the questions that follow.

My grandmother, like everybody's grandmother, was an old woman. She had been old and wrinkled for the twenty years that I had known her. People said that she once had been young and pretty and had even had a husband, but that was hard to believe. My grandfather's portrait hung above the mantelpiece in the drawing room. He wore a big turban and loose fitting clothes. His long, white beard covered the best part of his chest and he looked at least a hundred years old. He did not look the sort of person who would have a wife or children. He looked as if he could only have lots and lots of grandchildren. As my grandmother being young and pretty, the thought was almost revolting. She often told us of the games she used to play as a child. That seemed quite absurd and undignified on her part and we treated it like the fables of the Prophets she used to tell us.

SubQuestion No : 43

Q.43 Select an appropriate title for the given passage.

- Ans**
- ☒ 1. The Grandchildren
 - ☒ 2. My Grandfather
 - ☒ 3. Grandmothers
 - ☒ 4. My Grandmother

Question ID : 264330128920

Status : Answered

Chosen Option : 4

Comprehension:

Read the given passage and answer the questions that follow.

My grandmother, like everybody's grandmother, was an old woman. She had been old and wrinkled for the twenty years that I had known her. People said that she once had been young and pretty and had even had a husband, but that was hard to believe. My grandfather's portrait hung above the mantelpiece in the drawing room. He wore a big turban and loose fitting clothes. His long, white beard covered the best part of his chest and he looked at least a hundred years old. He did not look the sort of person who would have a wife or children. He looked as if he could only have lots and lots of grandchildren. As my grandmother being young and pretty, the thought was almost revolting. She often told us of the games she used to play as a child. That seemed quite absurd and undignified on her part and we treated it like the fables of the Prophets she used to tell us.

SubQuestion No : 44

Q.44 Select the most appropriate **ANTONYM** of the given word.
Revolting

- Ans**
- ☒ 1. Attractive
 - ☒ 2. Unpleasant
 - ☒ 3. Rebel
 - ☒ 4. Peace

Question ID : 264330128923

Status : Answered

Chosen Option : 1

Comprehension:

Read the given passage and answer the questions that follow.

My grandmother, like everybody's grandmother, was an old woman. She had been old and wrinkled for the twenty years that I had known her. People said that she once had been young and pretty and had even had a husband, but that was hard to believe. My grandfather's portrait hung above the mantelpiece in the drawing room. He wore a big turban and loose fitting clothes. His long, white beard covered the best part of his chest and he looked at least a hundred years old. He did not look the sort of person who would have a wife or children. He looked as if he could only have lots and lots of grandchildren. As my grandmother being young and pretty, the thought was almost revolting. She often told us of the games she used to play as a child. That seemed quite absurd and undignified on her part and we treated it like the fables of the Prophets she used to tell us.

SubQuestion No : 45

Q.45 Select the most appropriate inference drawn from the passage.

- Ans** ☒ 1. The author looked upon his grandmother as an old woman like every grandmother.
- ☐ 2. People said that the grandmother was pretty.
- ☐ 3. Grandmother had a husband.
- ☐ 4. Grandmother loved to talk of her childhood.

Question ID : 264330128921

Status : Answered

Chosen Option : 3

Section : General Awareness

Q.1 Which of the following statements is/are correct regarding the changes made to small savings schemes by the Government of India in December 2022?

- A. The interest rate of five year National Saving Certificate has been increased to 7 per cent from 6.8 per cent.
- B. The interest rate on senior citizen saving schemes increased to 8 per cent from 7.6 per cent.
- C. The interest rate on Public Provident Fund, Sukanya Samriddhi Account and Saving Deposit have been changed 9% from 7.5%.

- Ans** ☐ 1. B and C only
- ☐ 2. A, B and C
- ☐ 3. A and C only
- ☒ 4. A and B only

Question ID : 264330122938

Status : Not Answered

Chosen Option : --

Q.2 Which of the following states has the highest fertility rate in India according to the 2011 census?

- Ans** ☐ 1. Kerala
- ☐ 2. Punjab
- ☐ 3. Maharashtra
- ☒ 4. Bihar

Question ID : 264330109502

Status : Answered

Chosen Option : 4

Q.3 With the 2022 amendments to the Indian Constitution, which of the following communities have been granted the Scheduled Tribes status by the Government of India?

- A. Narikoravan community
- B. Hattee community
- C. Kadu Kuruba community
- D. Kapu community

Ans ✓ 1. A, B and C only

✗ 2. B, C and D only

✗ 3. A and D only

✗ 4. A, B, C and D

Question ID : 264330122807

Status : Not Answered

Chosen Option : --

Q.4 In 1962, who published 'The History of Ocean Basins', which outlined the theory of how tectonic plates could move, later called 'sea floor spreading'?

Ans ✗ 1. George Edward Backus

✗ 2. Alfred Wegener

✗ 3. Louis Bauer

✓ 4. Harry Hammond Hess

Question ID : 264330123855

Status : Not Answered

Chosen Option : --

Q.5 Identify a class of compounds that has a functional group –OH.

Ans ✓ 1. Alcohol

✗ 2. Ethane

✗ 3. Ketone

✗ 4. Aldehyde

Question ID : 26433064739

Status : Answered

Chosen Option : 1

Q.6 Match the columns.

Mineral	Reserves region
(A) Bauxite	(I) Lohardaga
(B) Mica	(II) Bhilwara
(C) Coal	(III) Jhunjhunu
(D) Copper	(IV) Jharia

Ans ✗ 1. A-IV, B-III, C-I, D-II

✓ 2. A-I, B-II, C-IV, D-III

✗ 3. A-II, B-III, C-IV, D-I

✗ 4. A-II, B-I, C-III, D-IV

Question ID : 264330121533

Status : Answered

Chosen Option : 3

Q.7 What was the distance (around in km) covered by the first-ever train between Bombay and Thane in 1853?

- Ans
- ☐ 1. 38
 - ☐ 2. 25
 - ☒ 3. 34
 - ☐ 4. 51

Question ID : 26433099168
Status : Not Answered
Chosen Option : --

Q.8 Match List-I and List-II regarding the BCCI awards for the year 2022.

- | List-I | List-II |
|----------------------|--|
| a) Rishabh Pant | i) Best Batsman in test matches for the year 2022 |
| b) Jasprit Bumrah | ii) Best Bowler in the test matches for the year 2022 |
| c) Surya Kumar Yadav | iii) Best batsman in the One Day International matches for the year 2022 |
| d) Shreyas Iyer | iv) Best Batsman in T20 matches for the year 2022 |

- Ans
- ☐ 1. a-ii, b-i, c-iv, d-iii
 - ☐ 2. a-ii, b-i, c-iii, d-iv
 - ☒ 3. a-i, b-ii, c-iv, d-iii
 - ☐ 4. a-i, b-ii, c-iii, d-iv

Question ID : 264330122944
Status : Answered
Chosen Option : 3

Q.9 Which of the following books was written by the Roman writer Pliny the elder?

- Ans
- ☐ 1. Indica
 - ☒ 2. Natural History
 - ☐ 3. Geographica
 - ☐ 4. Periplus of the Erythraean Sea

Question ID : 264330123889
Status : Answered
Chosen Option : 1

Q.10 Which law was studied in the year 1787, in which it was said that the volume of a gas increases with its absolute temperature and if its absolute temperature decreases, then its volume will decrease?

- Ans
- ☐ 1. Boyle's law
 - ☐ 2. Dalton's law
 - ☐ 3. Avogadro's law
 - ☒ 4. Charles's law

Question ID : 264330123825
Status : Answered
Chosen Option : 4

Q.11 In India, which of the following bills CANNOT be introduced in the Rajya Sabha?

- Ans**
- ☒ 1. Both constitutional amendment and ordinary bills
 - ☒ 2. The constitutional amendment bill
 - ☒ 3. The money bill
 - ☒ 4. The ordinary bill

Question ID : **264330109842**
Status : **Answered**
Chosen Option : **3**

Q.12 Which Article of the Constitution of India empowers a high court to issue a writ?

- Ans**
- ☒ 1. Article 132
 - ☒ 2. Article 226
 - ☒ 3. Article 143
 - ☒ 4. Article 32

Question ID : **264330110115**
Status : **Answered**
Chosen Option : **2**

Q.13 In which year was the Doppler effect discovered by Austrian scientist Christian Doppler, that describes the change in frequency of any kind of sound or light wave produced by a moving source with respect to an observer?

- Ans**
- ☒ 1. 1846
 - ☒ 2. 1844
 - ☒ 3. 1842
 - ☒ 4. 1840

Question ID : **264330123837**
Status : **Not Answered**
Chosen Option : **--**

Q.14 Which Article of the Constitution of India lays down that an Indian citizen has the right to use any restaurant, road or public place?

- Ans**
- ☒ 1. Article 17 (1)
 - ☒ 2. Article 15 (2)
 - ☒ 3. Article 14 (2)
 - ☒ 4. Article 16 (1)

Question ID : **264330110575**
Status : **Answered**
Chosen Option : **3**

Q.15 Which of the following is an indirect tax?

- Ans ☒ 1. Capital gains tax
☒ 2. Goods and services tax
☒ 3. Wealth tax
☒ 4. Gift tax

Question ID : 264330123884

Status : Answered

Chosen Option : 2

Q.16 Below are few statements given about afforestation.

- A. Afforestation could prevent flooding.
B. Afforestation can balance our ecosystem.

Which of above statements is/are correct?

- Ans ☒ 1. Both A & B are incorrect
☒ 2. Only B
☒ 3. Both A & B
☒ 4. Only A

Question ID : 264330121633

Status : Answered

Chosen Option : 3

Q.17 In India, which of the following is NOT an objective of the National Manufacturing Policy?

- Ans ☒ 1. To increase the sectoral share of manufacturing in GOP to at least 25% by 2022.
☒ 2. To double the exports of manufacturing goods by 2022.
☒ 3. To increase the rate of job creation so as to create 100 million additional jobs by 2022.
☒ 4. To enhance global competitiveness, domestic value addition, technological depth and environmental sustainability of growth.

Question ID : 26433059318

Status : Answered

Chosen Option : 1

Q.18 What is the name of the scheme launched in 2021 for students to attain foundational literacy and numeracy up to class 3?

- Ans ☒ 1. NIPUN Bharat
☒ 2. NISHTHA 2.0
☒ 3. SUGAM
☒ 4. SAFAL

Question ID : 264330123894

Status : Answered

Chosen Option : 1

Q.19 Identify which of the following statements are correct.

- 1.The headquarter of ICAR-Directorate of Groundnut Research is located in Junagarh.
- 2.The headquarter of ICAR-Directorate of Rapeseed & Mustard Research is located in Bharatpur.
- 3.The headquarter of ICAR-Directorate of Soybean Research is located in Indore.

Ans ☒ 1. 2 and 3 only
☒ 2. 1, 2 and 3
☒ 3. 1 and 2 only
☒ 4. 1 and 3 only

Question ID : 264330121514

Status : Not Answered

Chosen Option : --

Q.20 Zafar khan was a famous General of which of the following rulers of the Delhi Sultanate?

Ans ☒ 1. Alauddin Khilji
☒ 2. Iltutmish
☒ 3. Muhammad bin Tughluq
☒ 4. Balban

Question ID : 264330109011

Status : Not Answered

Chosen Option : --

Q.21 Which of the following statements is/are correct about the neighbouring countries of India?

- (A) India supported Maldives in 2022 with a grant of nearly \$4 billion to support the dwindling economy.
(B) India has the highest GDP in dollar terms as compared to Sri Lanka, Bhutan and Bangladesh.

Ans ☒ 1. Only B
☒ 2. Neither A nor B
☒ 3. Only A
☒ 4. Both A and B

Question ID : 264330121484

Status : Answered

Chosen Option : 1

Q.22 Which of the following is essential to form haemoglobin in blood?

Ans ☒ 1. Fats
☒ 2. Iron
☒ 3. Calcium
☒ 4. Protein

Question ID : 26433064425

Status : Answered

Chosen Option : 2

Q.23 Which of the following can degrade detritus into simpler inorganic substances?

- Ans
- ☐ 1. Algae
 - ☐ 2. Phytoplankton
 - ☒ 3. Fungal enzymes
 - ☐ 4. Lichens

Question ID : 264330123848

Status : **Marked For Review**

Chosen Option : 3

Q.24 What is the correct order of radiations in descending order of frequencies?

- Ans
- ☐ 1. Infrared > Microwaves > Radio waves > X-rays
 - ☐ 2. Radio waves > X-rays > Microwaves > Infrared
 - ☒ 3. X-rays > Infrared > Microwaves > Radio waves
 - ☐ 4. Infrared > Microwaves > X-rays > Radio waves

Question ID : 264330109880

Status : **Not Answered**

Chosen Option : --

Q.25 Which group of animals are named because of their spiny skin and have a peculiar water-driven tube system that they use for moving around?

- Ans
- ☐ 1. Hemichordata
 - ☐ 2. Aschelminthes
 - ☒ 3. Echinodermata
 - ☐ 4. Mollusca

Question ID : 264330123821

Status : **Answered**

Chosen Option : 3

Section : **Computer Knowledge Module**

Q.1 Some cookies are automatically recreated after a user has deleted them. These are called as _____ cookies.

- Ans
- ☐ 1. third party
 - ☒ 2. zombie
 - ☐ 3. persistent
 - ☐ 4. session

Question ID : 264330128777

Status : **Answered**

Chosen Option : 2

Q.2 Which among the following devices is also known as Visual Display Unit (VDU)?

- Ans**
- ☐ 1. Printer
 - ☐ 2. Scanner
 - ☐ 3. Track Ball
 - ☒ 4. Monitor

Question ID : 264330128744
Status : Answered
Chosen Option : 4

Q.3 In web browser, which of the following is responsible for displaying the web pages?

- Ans**
- ☐ 1. Server
 - ☒ 2. Rendering engine
 - ☐ 3. Page engine
 - ☐ 4. Search Engine

Question ID : 264330128738
Status : Answered
Chosen Option : 1

Q.4 Which among the following ports is also known as Line Printer Port?

- Ans**
- ☒ 1. Parallel
 - ☐ 2. Video Graphic Array
 - ☐ 3. High Definition Media Interface
 - ☐ 4. Display

Question ID : 264330128786
Status : Answered
Chosen Option : 3

Q.5 _____ viruses are embedded in a system's memory so it can be reactivated if the original virus is deleted.

- Ans**
- ☐ 1. File
 - ☒ 2. Resident
 - ☐ 3. Polymorphic
 - ☐ 4. Roolkit

Question ID : 264330128734
Status : Answered
Chosen Option : 2

Q.6 Which among the following statements is incorrect about secondary memory?

- Ans**
- ☒ 1. It is known as the backup memory.
 - ☒ 2. Data is permanently stored even if power is switched OFF.
 - ☒ 3. Computer may run without the secondary memory.
 - ☒ 4. It is a volatile memory.

Question ID : 264330128781

Status : **Answered**

Chosen Option : 2

Q.7 _____ memory is sometimes used to increase the speed of processing by making current programs and data available to the CPU at a rapid rate.

- Ans**
- ☒ 1. Backup
 - ☒ 2. Auxiliary
 - ☒ 3. Main
 - ☒ 4. Cache

Question ID : 264330128785

Status : **Marked For Review**

Chosen Option : 4

Q.8 Which of the following statement(s) about Quick Access Toolbar in MS-Word 2010 is/are incorrect?

P: The Quick Access Toolbar has Save, Undo, and Redo buttons by default.

Q: The Quick Access Toolbar has Cut, Undo, and Redo buttons by default.

R: You can place more buttons on the Quick Access toolbar.

S: There is no option on Quick Access toolbar for "show below the Ribbon".

- Ans**
- ☒ 1. Only Q and R
 - ☒ 2. Only Q and S
 - ☒ 3. only P, Q, R
 - ☒ 4. All P, Q, R, S

Question ID : 264330128735

Status : **Answered**

Chosen Option : 2

Q.9 _____ is the oldest type of Central Processing Unit (CPU).

- Ans**
- ☒ 1. Triple Core
 - ☒ 2. Single Core
 - ☒ 3. Dual Core
 - ☒ 4. Quad Core

Question ID : 264330128780

Status : **Not Answered**

Chosen Option : --

Q.10 Which of the following is Math and trigonometric functions available in MS-Excel 365?

- Ans**
- ☒ 1. Text function
 - ☒ 2. ABS function
 - ☒ 3. Logical function
 - ☒ 4. Financial function

Question ID : **264330128771**
Status : **Marked For Review**
Chosen Option : **3**

Q.11 Which among the following generations of computer used the technology of transistors for the first time?

- Ans**
- ☒ 1. Third
 - ☒ 2. Second
 - ☒ 3. First
 - ☒ 4. Fourth

Question ID : **264330128739**
Status : **Answered**
Chosen Option : **2**

Q.12 Which of the following option can be pressed to create a new email message in Gmail?

- Ans**
- ☒ 1. Settings
 - ☒ 2. Outbound
 - ☒ 3. Compose
 - ☒ 4. Drafts

Question ID : **264330128776**
Status : **Answered**
Chosen Option : **3**

Q.13 Each cell in the worksheet of MS-Excel 365 is identified by a cell _____.

- Ans**
- ☒ 1. color
 - ☒ 2. size
 - ☒ 3. rounding
 - ☒ 4. reference

Question ID : **264330128769**
Status : **Answered**
Chosen Option : **4**

Q.14 _____ is a type of dedicated file storage device that provides local-area network (LAN) users with centralized, consolidated disk storage through a standard Ethernet connection.

- Ans**
- ☐ 1. Solid-State Drive (SSD)
 - ☐ 2. USB Hard Drives
 - ☐ 3. USB Sticks
 - ☒ 4. Network Attached Storage (NAS)

Question ID : **264330128782**
Status : **Answered**
Chosen Option : **4**

Q.15 Which among the following statements is incorrect?

- Ans**
- ☒ 1.
The right window of Windows Explorer is called Navigation Pane.
 - ☐ 2.
From the Navigation pane, you can view your computer's file and folder structure and access files and folders.
 - ☐ 3. In the Navigation Pane, there is a Quick Access area.
 - ☐ 4.
Navigation Pane is to enable easier navigation through Windows Explorer.

Question ID : **264330128770**
Status : **Answered**
Chosen Option : **1**

Q.16 Once _____ has infected a substantial number of computer systems, it generates revenue either by displaying advertisements or using "pay per click" mechanism to charge its clients against the number of clicks on their displayed ads.

- Ans**
- ☐ 1. worms
 - ☐ 2. virus
 - ☐ 3. spyware
 - ☒ 4. adware

Question ID : **264330128788**
Status : **Answered**
Chosen Option : **4**

Q.17 Which among the following keyboard shortcuts is used to bookmark the current webpage on the web browser?

- Ans**
- ☐ 1. Ctrl + N
 - ☐ 2. Ctrl + I
 - ☐ 3. Ctrl + B
 - ☒ 4. Ctrl + D

Question ID : **264330128783**
Status : **Answered**
Chosen Option : **4**

Q.18 _____ is also known as protocol convertor.

- Ans
- ☐ 1. Hub
 - ☐ 2. Bridge
 - ☐ 3. Switch
 - ☒ 4. Gateway

Question ID : 264330128787
Status : Answered
Chosen Option : 3

Q.19 _____ are rules that exist at several levels in a telecommunication connection.

- Ans
- ☐ 1. Bandwidth
 - ☐ 2. Network Surface Unit
 - ☒ 3. Protocol
 - ☐ 4. Domain Name

Question ID : 264330128772
Status : Answered
Chosen Option : 3

Q.20 Which of the following font effects is not available in the MS-Word 2010 font dialog box?

- Ans
- ☐ 1. Superscript
 - ☐ 2. Small Cap
 - ☐ 3. Double Strikethrough
 - ☒ 4. Equalize Character Height

Question ID : 264330128693
Status : Not Answered
Chosen Option : --

Combined Graduate Level Examination Tier II 2022

Roll Number	
Candidate Name	
Venue Name	iON Digital Zone iDZ 1 Sector 62
Exam Date	06/03/2023
Exam Time	9:00 AM - 12:00 PM
Subject	CGLE 2022 Tier II Paper I

Section : Mathematical Abilities

Q.1 A pyramid has an equilateral triangle as its base, of which each side is 8 cm. Its slant edge is 24 cm. The whole surface area of the pyramid (in cm^2) is:

- Ans
- ☒ 1. $(16\sqrt{3} + 24\sqrt{35})$
 - ☒ 2. $(12\sqrt{3} + 24\sqrt{35})$
 - ☒ 3. $(24\sqrt{3} + 36\sqrt{35})$
 - ☒ 4. $(16\sqrt{3} + 48\sqrt{35})$

Question ID : 264330121751

Status : Not Answered

Chosen Option : --

Q.2 If 80 litres of milk solution has 60% milk in it, then how much milk should be added to make milk 80% in the solution?

- Ans
- ☒ 1. 70 litres
 - ☒ 2. 50 litres
 - ☒ 3. 60 litres
 - ☒ 4. 80 litres

Question ID : 26433058959

Status : Answered

Chosen Option : 4

Q.3 If the highest common factor (HCF) of x and y is 15, then the HCF of $36x^2 - 81y^2$ and $81x^2 - 9y^2$ is divisible by _____.

- Ans
- ☒ 1. 135
 - ☒ 2. 120
 - ☒ 3. 180
 - ☒ 4. 90

Question ID : 26433085413

Status : Not Answered

Chosen Option : --

Q.4 What is the perimeter of a square inscribed in a circle of radius 5 cm?

- Ans
- ✓ 1. $20\sqrt{2}$ cm
 - ✗ 2. $40\sqrt{2}$ cm
 - ✗ 3. $30\sqrt{2}$ cm
 - ✗ 4. $10\sqrt{2}$ cm

Question ID : 264330121657

Status : Answered

Chosen Option : 1

Q.5 If the curved surface area of a cylinder is 126π cm² and its height is 14 cm, what is the volume of the cylinder?

- Ans
- ✓ 1. $283\frac{1}{2}\pi$ cm³
 - ✗ 2. $137\frac{1}{2}\pi$ cm³
 - ✗ 3. $128\frac{1}{2}\pi$ cm³
 - ✗ 4. $125\frac{1}{2}\pi$ cm³

Question ID : 26433061088

Status : Answered

Chosen Option : 1

Q.6 Simplify the following.

$$\frac{\sqrt{10 + \sqrt{25 + \sqrt{108 + \sqrt{154 + \sqrt{225}}}}}}{\sqrt{16 + 19.25 \times 4^2}}$$

- Ans
- ✗ 1. $\frac{7}{18}$
 - ✓ 2. $\frac{2}{9}$
 - ✗ 3. $\frac{5}{18}$
 - ✗ 4. $\frac{1}{9}$

Question ID : 264330121706

Status : Answered

Chosen Option : 2

Q.7 A, B and C invested capital in the ratio of 3 : 4 : 8. At the end of the business term, they received the profit in the ratio of 2 : 3 : 5. What is the ratio of their invested time?

- Ans
- ☒ 1. 15 : 16 : 13
 - ☒ 2. 13 : 18 : 15
 - ☒ 3. 16 : 18 : 15
 - ☒ 4. 16 : 21 : 18

Question ID : 264330121645

Status : Not Answered

Chosen Option : --

Q.8 The probabilities of solving a problem by three students A, B and C are $\frac{3}{7}$, $\frac{5}{9}$ and $\frac{1}{5}$, respectively. The probability that problem will be solved is:

- Ans
- ☒ 1. $\frac{155}{315}$
 - ☒ 2. $\frac{64}{315}$
 - ☒ 3. $\frac{251}{315}$
 - ☒ 4. $\frac{32}{315}$

Question ID : 264330121654

Status : Not Answered

Chosen Option : --

Q.9 Reshma covers 45 km at a speed of 15 km/h by bicycle, 80 km at a speed of 40 km/h by car, and another 6 km at a speed of 2 km/h on foot. Find her average speed for the whole journey (correct to 2 decimal places).

- Ans
- ☒ 1. 16.38 km/h
 - ☒ 2. 43.50 km/h
 - ☒ 3. 18.36 km/h
 - ☒ 4. 15.25 km/h

Question ID : 264330126387

Status : Answered

Chosen Option : 1

Q.10 A dishonest dealer marks up his goods by 50% and then gives a discount of 20% on the marked price. Apart from this, he uses a faulty balance which reads 1kg for 900 gm. What is his net profit percentage (rounded off to the nearest integer)?

- Ans
- ☒ 1. 24
 - ☒ 2. 27
 - ☒ 3. 36
 - ☒ 4. 33

Question ID : 26433063209

Status : Not Answered

Chosen Option : --

Q.11 If $\triangle ABC$ is right angled at B, $AB = 12$ cm and $\angle CAB = 60^\circ$, determine the length of BC.

- Ans
- ☒ 1. $24\sqrt{3}$ cm
 - ☒ 2. 12 cm
 - ☒ 3. $12\sqrt{2}$ cm
 - ☒ 4. $12\sqrt{3}$ cm

Question ID : 264330126426
Status : Answered
Chosen Option : 4

Q.12 Find the number of diagonals of a regular polygon, sum of whose interior angles is 2700° .

- Ans
- ☒ 1. 121
 - ☒ 2. 119
 - ☒ 3. 127
 - ☒ 4. 117

Question ID : 264330121663
Status : Not Answered
Chosen Option : --

Q.13 In 5 years, the simple interest on an amount of Rs. X is $\frac{2}{5}$ of the principal. The rate of interest per annum is:

- Ans
- ☒ 1. 12%
 - ☒ 2. 8%
 - ☒ 3. 10%
 - ☒ 4. 5%

Question ID : 264330126377
Status : Answered
Chosen Option : 2

Q.14 Find the value of given expression.
 $3 - (-6) \{-2 - 9 - 3\} \div 7\{1 + (-2)(-1)\}$

- Ans
- ☒ 1. -1
 - ☒ 2. 15
 - ☒ 3. 7
 - ☒ 4. 1

Question ID : 264330122831
Status : Answered
Chosen Option : 2

Q.15 The difference between the length of two parallel sides of a trapezium is 12 cm. The perpendicular distance between these two parallel sides is 60 cm. If the area of the trapezium is 1380 cm^2 , then find the length of each of the parallel sides (in cm).

- Ans
- ☒ 1. 27, 15
 - ☒ 2. 31, 19
 - ☒ 3. 29, 17
 - ☒ 4. 24, 12

Question ID : 264330121753
Status : Not Answered
Chosen Option : --

Q.16 For a sample data, mean = 60 and median = 48. For this distribution, the mode is:

- Ans
- ☒ 1. 18
 - ☒ 2. 48
 - ☒ 3. 36
 - ☒ 4. 24

Question ID : 264330121731
Status : Not Answered
Chosen Option : --

Q.17 The centroid of an equilateral triangle PQR is L. If PQ = 6 cm, the length of PL is:

- Ans
- ☒ 1. $4\sqrt{3}$ cm
 - ☒ 2. $3\sqrt{3}$ cm
 - ☒ 3. $2\sqrt{3}$ cm
 - ☒ 4. $5\sqrt{3}$ cm

Question ID : 264330126439
Status : Not Answered
Chosen Option : --

Q.18 Find the exact value of $\cos 120^\circ$.

- Ans
- ☒ 1. 1
 - ☒ 2. 0
 - ☒ 3. -0.5
 - ☒ 4. 0.5

Question ID : 264330126428
Status : Answered
Chosen Option : 3

Q.19 If $4x^2 + y^2 = 40$ and $xy = 6$, then find the value of $2x + y$.

- Ans
- ☒ 1. 6
 - ☒ 2. 8
 - ☒ 3. 5
 - ☒ 4. 4

Question ID : 26433082109
Status : Answered
Chosen Option : 2

Q.20 The ratio of the number of coins of 25 paise, 50 paise, Rs.2 and Rs.5 is 5 : 4 : 3 : 1, respectively. If the total amount of the coins is Rs.285, then the difference between the number of 25 paise and Rs.5 coins is:

- Ans
- ☒ 1. 80
 - ☒ 2. 30
 - ☒ 3. 40
 - ☒ 4. 60

Question ID : 26433061149
Status : Not Answered
Chosen Option : --

Q.21 The average marks obtained by Saloni in four papers is 51, and in the fifth paper she gets 56 marks. Find her new average in all five papers.

- Ans
- ☒ 1. 51
 - ☒ 2. 52
 - ☒ 3. 49
 - ☒ 4. 50

Question ID : 26433073077
Status : Answered
Chosen Option : 2

Q.22 A and B can complete a work together in 48 days. A is 4 times as work efficient as B. In how many days can B alone complete the work?

- Ans
- ☒ 1. 220 days
 - ☒ 2. 320 days
 - ☒ 3. 240 days
 - ☒ 4. 120 days

Question ID : 264330121649
Status : Answered
Chosen Option : 3

Q.23 For what value of m will the system of equations $18x-72y+13=0$ and $7x-my-17=0$ have no solution?

- Ans ☒ 1. 28
☐ 2. 24
☐ 3. 9
☐ 4. 12

Question ID : 264330121747
Status : Not Answered
Chosen Option : --

Q.24 Successive discounts of 10% and 10% are equivalent to a single discount of:

- Ans ☐ 1. 18%
☒ 2. 19%
☐ 3. 20%
☐ 4. 21%

Question ID : 26433056314
Status : Answered
Chosen Option : 2

Q.25 From the top of an upright pole $24\sqrt{3}$ feet high, the angle of elevation of the top of an upright tower was 60° . If the foot of the pole was 60 feet away from the foot of the tower, what tall (in feet) was the tower?

- Ans ☒ 1. $84\sqrt{3}$
☐ 2. $36\sqrt{3}$
☐ 3. $44\sqrt{3}$
☐ 4. $60\sqrt{3}$

Question ID : 264330122895
Status : Answered
Chosen Option : 1

Q.26 The mode of the following data is _____.
13,15,31,12,27,13,27,30,27,28 and 16

- Ans ☐ 1. 28
☒ 2. 27
☐ 3. 30
☐ 4. 31

Question ID : 264330126394
Status : Not Answered
Chosen Option : --

Q.27 Six years ago, the ratio of ages of A to B was 7 : 5. After 4 years from now, the ratio of their ages will be 11 : 9. What is A's age at present?

Ans

☐ 1. $24\frac{1}{2}$ years

☐ 2. $22\frac{1}{2}$ years

☒ 3. $23\frac{1}{2}$ years

☐ 4. $21\frac{1}{2}$ years

Question ID : 264330121655

Status : Answered

Chosen Option : 3

Q.28 Mrs. Deepa Devi saves 30% of her salary. If she receives Rs.42,000 per month as her salary, what is her monthly expenditure?

Ans

☐ 1. Rs.29,200

☒ 2. Rs.29,400

☐ 3. Rs.29,300

☐ 4. Rs.29,100

Question ID : 26433066356

Status : Answered

Chosen Option : 2

Q.29 Find the amount (integral value only) if a sum of ₹6,500 is being borrowed at 10% interest per annum for 2 years if interest is compounded half-yearly.

Ans

☐ 1. ₹.8,150

☒ 2. ₹.7,900

☐ 3. ₹.7,650

☐ 4. ₹.8,250

Question ID : 264330126382

Status : Not Answered

Chosen Option : --

Q.30 The number 1254216 is divisible by which of the following numbers?

Ans

☐ 1. 5

☐ 2. 11

☐ 3. 16

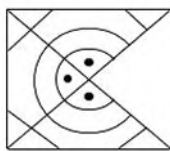
☒ 4. 8

Question ID : 264330126418

Status : Answered

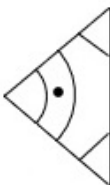
Chosen Option : 4

Q.1 Select the figure from the options that can replace the question mark (?) and complete the given pattern.



Ans

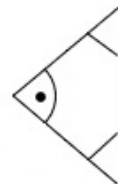
✗ 1.



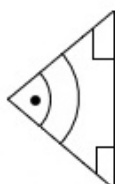
✓ 2.



✗ 3.



✗ 4.



Question ID : 26433083131

Status : Answered

Chosen Option : 2

Q.2 If \div means $-$, $-$ means \times , \times means $+$, $+$ means \div , what will come in place of the question mark (?)?

$$77 \div 7 \times 17 - 49 + 7 = ?$$

Ans ✓ 1. 189

✗ 2. 119

✗ 3. 145

✗ 4. 169

Question ID : 26433068118

Status : Answered

Chosen Option : 1

Q.3 A question is given, followed by two statements numbered (I) and (II). You have to decide whether the data provided in the statements is sufficient to answer the question. Read both the statements and select the appropriate answer.

Question: How many people are standing in the row where all people are facing north?

Statements:

(I) A is fourth from the left end; M is second to the right of A; and R is second from the left end.

(II) M is fourth from the right end; only two people stand between M and B.

- Ans** ☒ 1. Data in either statement I alone or statement II alone is sufficient to answer the question
- ☒ 2. Data in statements I and II together is sufficient to answer the question
- ☒ 3. Data in statement I alone is sufficient to answer the question while data in statement II is not
- ☒ 4. Data in statement II alone is sufficient to answer the question while data in statement I is not

Question ID : 264330121197

Status : Answered

Chosen Option : 2

Q.4 Three of the following words are alike in some manner and hence form a group. Which word does NOT belong to that group? (The words must be considered as meaningful English words and must not be grouped based on the number of letters/number of consonants/vowels in the word)

- Ans** ☒ 1. Chickens
- ☒ 2. Bats
- ☒ 3. Seals
- ☒ 4. Rodents

Question ID : 26433065635

Status : Answered

Chosen Option : 4

Q.5 In a certain code language, 'MADRAS' is written as '112' and 'JAMMU' is written as '82'. How will 'PUNJAB' be written in that language?

- Ans** ☒ 1. 109
- ☒ 2. 104
- ☒ 3. 112
- ☒ 4. 115

Question ID : 264330126263

Status : Answered

Chosen Option : 2

Q.6 'A # B' means 'A is the brother of B'.
 'A @ B' means 'A is the daughter of B'.
 'A & B' means 'A is the husband of B'.
 'A % B' means 'A is the wife of B'.
 If D @ N @ H & Y @ F % V, then how is Y related to D?

- Ans ☒ 1. Mother
☒ 2. Husband's mother
☒ 3. Father's sister
☒ 4. Mother's mother

Question ID : 264330126289

Status : Answered

Chosen Option : 4

Q.7 Out of the following five figures, four are alike in some manner and one differs from these in that manner. Select the odd figure.



Ans

- ☒ 1.
- ☒ 2.
- ☒ 3.
- ☒ 4.

Question ID : 264330128897

Status : Not Answered

Chosen Option : --

Q.8 Select the number from among the given options that can replace the question mark (?) in the following series.
48, 75, 108, ?, 192

Ans ☒ 1. 153

☒ 2. 147

☒ 3. 112

☒ 4. 126

Question ID : 26433074541

Status : Answered

Chosen Option : 2

Q.9 Select the set in which the numbers are related in the same way as are the numbers of the following set.

(NOTE : Operations should be performed on the whole numbers, without breaking down the numbers into its constituent digits. E.g. 13 – Operations on 13 such as adding /deleting /multiplying etc. to 13 can be performed. Breaking down 13 into 1 and 3 and then performing mathematical operations on 1 and 3 is NOT allowed)

(8, 1, 46)

(9, 4, 22)

Ans ☒ 1. (4,2,5)

☒ 2. (8,5,43)

☒ 3. (7,3,13)

☒ 4. (7,6,13)

Question ID : 264330126250

Status : Not Answered

Chosen Option : --

Q.10 In this question, a question is followed by two statements numbered (I) and (II). You have to decide whether the data provided in the statement/s are sufficient to answer the question. Read both the statements and choose your answer carefully.

Question: P, Q, R, S, T, U and V are 7 people standing in a row all facing North (not necessarily in the same order). Who is standing second to the right of T?

Statements:

(I) U is standing 3rd from the right end and 2nd to the left of R.

(II) Q is standing to the immediate right of T. Q is standing 2nd to the left of P.

Ans ☒ 1. The data in both the Statements (I) and (II) together are sufficient to answer the question.

☒ 2. The data in Statement (II) alone is sufficient to answer the question, while the data in statement (I) alone is not sufficient to answer the question.

☒ 3. The data in Statement (I) alone is sufficient to answer the question, while the data in Statement (II) alone is not sufficient to answer the question.

☒ 4. The data in both the Statements (I) and (II) together are NOT sufficient to answer the question.

Question ID : 264330121304

Status : Answered

Chosen Option : 4

- ☒ 1. Daughter
- ☐ 2. Daughter's daughter
- ☐ 3. Sister's daughter
- ☐ 4. Son's wife

Question ID : 264330126294
Status : Answered
Chosen Option : 2

Q.12 A situation is given, followed by two conclusions I and II. Read the situation and both the conclusions carefully and select the correct answer.

Situation:

Since the past 15 years, 75% of the products in the world's pottery market comes from Country K. However, the employment in the pottery industry of Country K has been consistently declining by 5-9% every year since the past 3 years.

Conclusions:

I. Even after declining employment, Country K has enough potters to continue contributing equally to the international market.

II. The local demand of pottery in Country K has substantially decreased leading to less interest among potters.

Ans

- ☐ 1. Neither I nor II can be concluded
- ☐ 2. Only II can be concluded
- ☒ 3. Only I can be concluded
- ☐ 4. Both I and II can be concluded

Question ID : 264330121678
Status : Not Answered
Chosen Option : --

Q.13 Select the correct mirror image of the given combination when the mirror is placed at 'PQ' as shown below.

liiCqEyeUshled

Ans

- ☐ 1. !!l!CqEyUshled
- ☐ 2. !!l!CdEYUshled
- ☒ 3. !!l!CdEYUshled
- ☐ 4. !!l!CqEyUshled

Question ID : 264330126298
Status : Answered
Chosen Option : 3

Q.14 Select the correct combination of mathematical signs to sequentially replace the * signs and balance the given equation.

$$268 * 4 * 8 * 5 * 14 = 41$$

Ans ☒ 1. + × - ÷

☒ 2. × + + -

☒ 3. ÷ × + -

☒ 4. ÷ - × +

Question ID : 26433068108

Status : Answered

Chosen Option : 4

Q.15 In a code language, 'PLUMAGE' is written as 'GICOWNR' and 'CRUSH' is written as 'JUWTE'. How will 'TRIBAL' be written in that language?

Ans ☒ 1. NCDKTV

☒ 2. NCBJTV

☒ 3. NCDJTV

☒ 4. NCBKTV

Question ID : 26433068943

Status : Answered

Chosen Option : 1

Q.16 Each of A, B, C, D, E, F and G has an exam on a different day of a week starting from Monday and ending on Sunday of the same week. A has an exam on Wednesday. Only one person has an exam between A and B. D has an exam on the day immediately before B. Only one person has an exam between F and B. G's exam is on one of the days before A but on one of the days after C. On which day does G have an exam?

Ans ☒ 1. Friday

☒ 2. Tuesday

☒ 3. Monday

☒ 4. Wednesday

Question ID : 264330121144

Status : Answered

Chosen Option : 2

Q.17 The sequence of folding a piece of paper and the manner in which the folded paper has been cut is shown below. Choose a figure which would most closely resemble the unfolded form of the paper.



Ans

✓ 1.



✗ 2.



✗ 3.



✗ 4.



Question ID : 264330126305

Status : Answered

Chosen Option : 1

Q.18 In this question, two statements I and II have been given. These statements may be independent causes or effects of independent causes or a common cause. One of the statements may be the effect of the other statement. Read both statements and select the correct answer.

I. Since the past three years, State M has reported a sharp and substantial decline in the state's agricultural produce.

II. In the last five years, there has been an increase in the overall average Rainfall by 6% in State M bringing respite to the farmers.

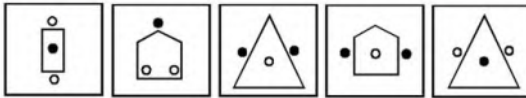
- Ans
- ☒ 1. I is the cause and II is its possible effect
 - ☒ 2. Both I and II are independent causes
 - ☒ 3. II is the cause and I is its possible effect
 - ☒ 4. Both I and II are effects of independent causes

Question ID : 264330123145

Status : Answered

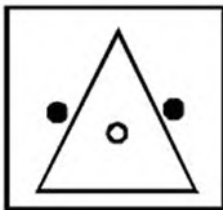
Chosen Option : 4

Q.19 Out of the following five figures, four are alike in some manner and one differs from these in that manner. Select the odd figure.

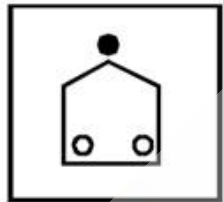


Ans

☒ 1.



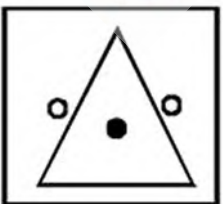
☒ 2.



☒ 3.



☒ 4.



Question ID : 264330128892

Status : Not Answered

Chosen Option : --

Q.20 Directions: A statement is given followed by two inferences I and II. You have to consider the statement to be true even if it seems to be at variance with commonly known facts. You have to decide which of the given inferences, if any, follow from the given statement.

Statement:

Many students are addicted to mobile games and this leads to poor academic performance.

Inference:

I. Many Students are not paying attention to studies due to mobile games.

II. It is only because of mobile games that students fail in the examination.

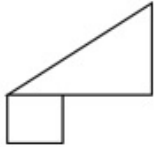
- Ans**
- ☒ 1. If only II follows
 - ☒ 2. If neither I nor II follows
 - ☒ 3. If both I and II follow
 - ☒ 4. If only I follows

Question ID : 264330128902

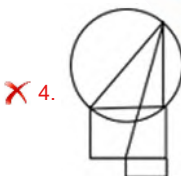
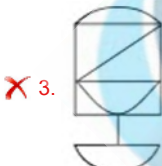
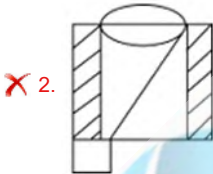
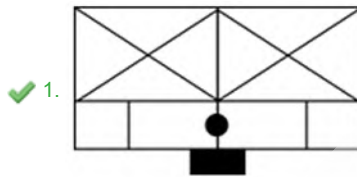
Status : Answered

Chosen Option : 4

Q.21 Select the option in which the following figure is embedded. (Rotation is NOT allowed)



Ans



Question ID : 264330121394

Status : Answered

Chosen Option : 1

Q.22 Select the option that represents the letters that, when placed from left to right in the following blanks, will complete the letter-series.

F I R _ D F _ _ E D F _ T _ D F I _ E _

- Ans ☒ 1. E I S I E U D
☐ 2. E G S J E U E
☐ 3. E H S I E U D
☐ 4. E I S I E U E

Question ID : 264330126279

Status : Answered

Chosen Option : 1

Q.23 Given in the table are the number codes for the given letters. Select the combination of numbers so that the letters arranged accordingly will form a meaningful word.

L	P	C	E	I	N
1	2	3	4	5	6

- Ans ☐ 1. 3,4,1,5,2,6
☐ 2. 6,5,3,4,1,2
☒ 3. 2,4,6,3,5,1
☐ 4. 2,4,6,3,1,5

Question ID : 264330121090

Status : Answered

Chosen Option : 3

Q.24 Which of the following letter-clusters should replace # and % so that the pattern and relationship followed between the letter-cluster pair on the left side of :: is the same as that on the right side of ::?

: KNF :: QCV : %

- Ans ☐ 1. # = IPD, % = OET
☐ 2. # = HPD, % = NFS
☒ 3. # = MLH, % = OET
☐ 4. # = HQC, % = NFS

Question ID : 264330121407

Status : Answered

Chosen Option : 1

Q.25 In this question, the statement is followed by two conclusions. Which of the two conclusion(s) is/are true?

Statement: $Z > F \geq A = B = G > S < E$

Conclusions:

I. $Z < A$

II. $G < F$

- Ans ☐ 1. Only conclusion I is true.
☐ 2. Only conclusion II is true.
☐ 3. Both conclusions I and II are true.
☒ 4. Neither conclusion I nor II is true.

Question ID : 26433069224

Status : Answered

Chosen Option : 4

Q.26 The second number in the given number-pairs is obtained by performing certain mathematical operation(s) on the first number. The same operation(s) is/are followed in all the number-pairs except one. Find that odd number-pair.

Ans ✓ 1. 18 : 42

✗ 2. 1 : 6

✗ 3. 15 : 34

✗ 4. 7 : 18

Question ID : 264330126256

Status : Answered

Chosen Option : 1

Q.27 Three statements are given, followed by three conclusions numbered I, II and III. Assuming the statements to be true, even if they seem to be at variance with commonly known facts, decide which of the conclusions logically follow(s) from the statements.

Statements:

I. All phones are laptops.

II. All pen-drives are phones.

III. All pen-drives are pens.

Conclusions:

I. All pens are phones.

II. All laptops are pens.

III. All pen-drives are laptops.

Ans ✓ 1. Only conclusion III follows

✗ 2. Only conclusions I and II follow

✗ 3. Only conclusions II and III follow

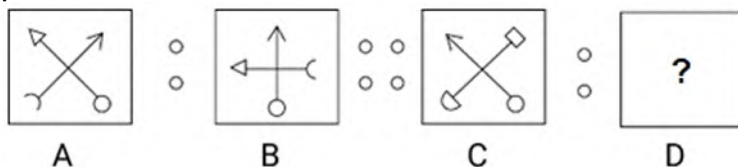
✗ 4. Only conclusions I and III follow

Question ID : 26433097424

Status : Answered

Chosen Option : 1

Q.28 Figure A is related to B following a certain pattern. Following the same pattern, figure C is related to D. Study the pattern and select the figure which should be placed in place of D.



Ans

- ☒ 1.
- ☒ 2.
- ☒ 3.
- ☒ 4.

Question ID : 264330121401

Status : Answered

Chosen Option : 4

Q.29 There are 4 friends A, B, C and D standing in a straight line, though not necessarily in the same order. A and B are ahead of at least 1 person. B stands between C and D. D does not stand last. Who stands first?

- Ans
- ☒ 1. A
 - ☒ 2. B
 - ☒ 3. C
 - ☒ 4. D

Question ID : 26433085694

Status : Answered

Chosen Option : 4

Q.30 Select the figure that will come in place of the question mark (?) in the following figure series.



Ans

✗ 1.



✗ 2.



✗ 3.



✓ 4.



Question ID : 264330100891

Status : Answered

Chosen Option : 4

Section : English Language and Comprehension

Q.1 The following sentence has been split into four segments. Identify the segment that contains a grammatical error.

The postman / delivers the letters / through hand, / door to door.

Ans ✗ 1. door to door

✗ 2. delivers the letters

✗ 3. The postman

✓ 4. through hand

Question ID : 264330123940

Status : Answered

Chosen Option : 2

Q.2 Select the most appropriate collocating word to fill in the blank.

Mentally strong people do not _____ to suicide over trivial issues.

Ans ✗ 1. Make up

✓ 2. Give in

✗ 3. Conceive on

✗ 4. Fall in

Question ID : 26433058374

Status : Answered

Chosen Option : 4

Q.3 Sentences of a paragraph are given below in jumbled order. Arrange the sentences in the correct order to form a meaningful and coherent paragraph.
P. Perhaps no definition of democracy is more popular and universally acceptable than what is given by Abraham Lincoln.
Q. He defines democracy as "a government of the people, by the people and for the people".
R. Certainly, democracy is the most representative form of government.
S. To bind the people and take the nation ahead on the path of progress, democracy is the most suitable form of government for India.

- Ans ☒ 1. PSRQ
☒ 2. QRSP
☒ 3. PQRS
☒ 4. SRQP

Question ID : 264330121859

Status : Answered

Chosen Option : 3

Q.4 Parts of a sentence/paragraph are given below. While the first and the last parts (A and F) are in the correct order, the parts in between are jumbled up. Arrange the parts in the correct order to form a meaningful and coherent sentence/paragraph.

- A. I love
B. so that
C. every morning
D. for a walk
E. to go
F. I can keep myself fit and healthy.

- Ans ☒ 1. B, C, D, E
☒ 2. D, E, B, C
☒ 3. C, B, D, E
☒ 4. E, D, C, B

Question ID : 26433072504

Status : Answered

Chosen Option : 4

Q.5 The following sentence has been split into four segments. Identify the segment that contains a grammatical error.
She watched / the thief who / steal the purse / in the bus.

- Ans ☒ 1. the thief who
☒ 2. in the bus
☒ 3. steal the purse
☒ 4. She watched

Question ID : 264330123922

Status : Answered

Chosen Option : 3

Q.6 Select the most appropriate **ANTONYM** of the underlined word.

The manager decided to resign from his post as the bank was declared to be insolvent.

- Ans**
- ☒ 1. Independent
 - ☒ 2. Commercial
 - ☒ 3. Affluent
 - ☒ 4. Bankrupt

Question ID : 26433070534
Status : Answered
Chosen Option : 3

Q.7 Select the most appropriate **ANTONYM** for the word 'often' in the following sentence.
Usually at Christmas, uncle often brings lovely and cherished gifts for us.

- Ans**
- ☒ 1. seldom
 - ☒ 2. cherished
 - ☒ 3. lovely
 - ☒ 4. usually

Question ID : 26433058563
Status : Answered
Chosen Option : 1

Q.8 Select the option that expresses the given sentence in active voice.
A new book on games will be released by the publishers next week.

- Ans**
- ☒ 1. The publishers will release a new book on games next week.
 - ☒ 2. The publishers will publish a new book on games next week.
 - ☒ 3. The publishers will be releasing a new book next week.
 - ☒ 4. The publishers would release a new book next week.

Question ID : 26433058363
Status : Answered
Chosen Option : 1

Q.9 Select the most appropriate option to fill in the blank.

The movie was released _____ expected.

- Ans**
- ☒ 1. later than
 - ☒ 2. most later than
 - ☒ 3. later then
 - ☒ 4. more later than

Question ID : 26433061504
Status : Answered
Chosen Option : 1

Q.10 Select the correct collocation from the options and complete the sentence.

Rahul is ____ Coding.

- Ans ☒ 1. skilled on
☒ 2. strong of
☒ 3. experienced of
☒ 4. experienced in

Question ID : 26433089399

Status : Answered

Chosen Option : 4

Q.11 Select the option that can be used as a one-word substitute for the given group of words.

The science and art of growing vegetables, fruits and flowers

- Ans ☒ 1. Herpetology
☒ 2. Horticulture
☒ 3. Haplology
☒ 4. Herbing

Question ID : 26433072446

Status : Answered

Chosen Option : 2

Q.12 Select the option that can be used as a one-word substitute for the given group of words.

One who is a boot licker and flatterer.

- Ans ☒ 1. Gold-digger
☒ 2. Gregarious
☒ 3. Sycophant
☒ 4. Manipulative

Question ID : 26433055975

Status : Answered

Chosen Option : 2

Q.13 Select the option that expresses the given sentence in indirect speech.

I said to Mohan, "He has a green book."

- Ans ☒ 1. I told Mohan that he had had a green book.
☒ 2. I told Mohan that he have a green book.
☒ 3. I told Mohan that he had a green book.
☒ 4. I told Mohan that he has a green book.

Question ID : 26433084730

Status : Answered

Chosen Option : 4

Q.14 Select the most appropriate homonym to fill in the blank.
The farmers grow _____ in their fields.

- Ans
- ☒ 1. maze
 - ☒ 2. mays
 - ☒ 3. mase
 - ☒ 4. maize

Question ID : 26433058529
Status : Answered
Chosen Option : 4

Q.15 Select the INCORRECTLY spelt word.

- Ans
- ☒ 1. Abhorrent
 - ☒ 2. Abseil
 - ☒ 3. Acede
 - ☒ 4. Abscess

Question ID : 264330123969
Status : Not Answered
Chosen Option : --

Q.16 Sentences of a paragraph are given below in jumbled order. Arrange the sentences in the correct order to form a meaningful and coherent paragraph.

- A. Fort Hare was more than that: it was a beacon for African scholars from all over Southern Central and Eastern Africa.
- B. Until 1960, the University College of Fort Hare, in the municipality of Alice, about twenty miles due east from Healdtown, was the only residential center of higher education for blacks in South Africa.
- C. For young black South Africans like myself, it was Oxford and Cambridge, Harvard and Yale, all rolled into one.
- D. The regent was anxious for me to attend Fort Hare and I was gratified to be accepted there. I felt that I was being groomed for success in the world.

- Ans
- ☒ 1. BACD
 - ☒ 2. BCAD
 - ☒ 3. CABD
 - ☒ 4. BDAC

Question ID : 26433060108
Status : Answered
Chosen Option : 2

Q.17 Select the option that will improve the underlined part of the given sentence.

Riya ran as fastly as a cheetah and saved the child from falling.

- Ans
- ☒ 1. faster
 - ☒ 2. fasting
 - ☒ 3. fast
 - ☒ 4. fastest

Question ID : 26433059045
Status : Answered
Chosen Option : 3

Q.18 Sentences of a paragraph are given below in jumbled order. Arrange the sentences in the correct order to form a meaningful and coherent paragraph.

A. We reached there at about 10 a.m.

B. The first ride we took was the Fury Wheel. It was really big, all of us were yelling and crying!

C. Yesterday, my friends and I went on a short picnic to an amusement park.

D. Even though we had reached on time there was a serpentine queue for the tickets. I took the entrance ticket.

Ans ☒ 1. CADB

☒ 2. ABCD

☒ 3. CDBA

☒ 4. ADBC

Question ID : 26433058356

Status : Answered

Chosen Option : 1

Q.19 Sentences of a paragraph are given below in jumbled order. Arrange the sentences in the correct order to form a meaningful and coherent paragraph.

A. Helping parents become savvier at picking care options and tossing retention bonuses to caregivers are others.

B. These fixes, importantly, can make child care more affordable for parents and offer life rafts to centres hemorrhaging workers.

C. The most proposed government solution for child care involves building on top of this flawed system is offering more vouchers to purchase private child care.

D. But they do little to address the structural needs: improved quality for kids, better wages and working conditions for workers, and more choices in the low-income neighbourhoods.

Ans ☒ 1. CDBA

☒ 2. CBDA

☒ 3. CABD

☒ 4. BADC

Question ID : 264330122798

Status : Answered

Chosen Option : 1

Q.20 Select the most appropriate meaning of the given idiom.

Achilles' Heel

Ans ☒ 1. Irrelevant thing

☒ 2. Vulnerable point

☒ 3. Fast runner

☒ 4. Costly item

Question ID : 26433072306

Status : Not Answered

Chosen Option : --

Q.21 Select the most appropriate synonym of the underlined word.

Bullying is a rather unacknowledged social evil.

Ans ☒ 1. Unidentified

☐ 2. Notable

☐ 3. Infamous

☐ 4. Named

Question ID : 264330122756

Status : Answered

Chosen Option : 3

Q.22 Identify the option that arranges the given parts in the correct order to form a meaningful paragraph.

A. In speed, in comfort, in beauty, in equipment she was a masterpiece.

B. It was the envy and admiration of the maritime nations of the world.

C. The Titanic was the Queen Alary of her day and the pride of the White Star Line.

D. Everything about her was attractive and fascinating.

Ans ☒ 1. CBAD

☐ 2. ABCD

☐ 3. CDAB

☐ 4. DCAB

Question ID : 26433072690

Status : Answered

Chosen Option : 3

Q.23 Select the most appropriate homonym to fill in the blank.
_____ knowledge in this field is really profound.

Ans ☐ 1. There

☒ 2. Their

☐ 3. Dare

☐ 4. They're

Question ID : 26433058518

Status : Answered

Chosen Option : 2

Q.24 Choose the correct spelling of the underlined word in the given sentence.
The committee could not reach a consence even after a six-hour long meeting yesterday.

Ans ☒ 1. consensus

☐ 2. conscius

☐ 3. cautius

☐ 4. conscientios

Question ID : 26433059842

Status : Answered

Chosen Option : 1

Q.25 Select the option that expresses the given sentence in reported speech.
She asked, "Are you meeting my partners next week?"

- Ans
- ☐ 1. She asked about our meeting her partners next week.
 - ☐ 2. She asked if we meet her partners next week.
 - ☒ 3. She asked if we were meeting her partners the following week.
 - ☐ 4. She asked if we were meeting her partners next week.

Question ID : 26433059119
Status : Answered
Chosen Option : 4

Q.26 Select the option that expresses the given sentence in direct speech.
I warned Rita not to be late the next day.

- Ans
- ☐ 1. I warned to Rita, "Don't be late tomorrow".
 - ☐ 2. I warning Rita, "Not be late tomorrow".
 - ☐ 3. I warned Rita, "Not be late tomorrow".
 - ☒ 4. I warned Rita, "Don't be late tomorrow".

Question ID : 26433070764
Status : Answered
Chosen Option : 3

Q.27 Select the most appropriate meaning of the highlighted idiom
The actress' daughter is just a chip off the old block

- Ans
- ☐ 1. To get into the enemy's territory
 - ☒ 2. Similar to one's parents in behaviour
 - ☐ 3. To console the dreary
 - ☐ 4. To chip off the edges

Question ID : 264330120746
Status : Answered
Chosen Option : 2

Q.28 Select the option that expresses the given sentence in passive voice.
The Event Management team organised the wedding.

- Ans
- ☐ 1. The wedding is organised by the Event Management team.
 - ☐ 2. The Event Management has organised the wedding.
 - ☐ 3. The Event Management team is organising the wedding.
 - ☒ 4. The wedding was organised by the Event Management team.

Question ID : 26433059193
Status : Answered
Chosen Option : 4

Q.29 Select the option that expresses the given sentence in active voice.
A new gallery is being built inside the city stadium.

- Ans ☒ 1. They will build a new gallery inside the city stadium.
- ☒ 2. They were building a new gallery inside the city stadium.
- ☒ 3. They have been building a new gallery inside the city stadium.
- ☒ 4. They are building a new gallery inside the city stadium.

Question ID : 264330123910

Status : Answered

Chosen Option : 2

Comprehension:

In the following passage, some words have been deleted. Read the passage carefully and select the most appropriate option to fill in each blank.

The phrase non-governmental or non-profit is commonly used to refer to the various organisations that (1)_____ civil society. In general, such organisations are distinguished by the (2)_____ that they operate for reasons other than financial gain. Surveys indicate that NGOs have a high degree of public (3)_____, which can make them a useful proxy for the concerns of society and stakeholders. NGOs range from small pressure groups on specific environmental concerns or human rights (4)_____, to educational charities, women's refuges, cultural associations, religious organisations, legal foundations, humanitarian assistance programmes – and the list could go on – to large international organisations with hundreds or even thousands of branches or members around the world.

SubQuestion No : 30

Q.30 Select the most appropriate option to fill in blank number 1.

- Ans ☒ 1. comprises
- ☒ 2. comprising
- ☒ 3. comprised
- ☒ 4. comprise

Question ID : 264330128960

Status : Answered

Chosen Option : 4

Comprehension:

In the following passage, some words have been deleted. Read the passage carefully and select the most appropriate option to fill in each blank.

The phrase non-governmental or non-profit is commonly used to refer to the various organisations that (1)_____ civil society. In general, such organisations are distinguished by the (2)_____ that they operate for reasons other than financial gain. Surveys indicate that NGOs have a high degree of public (3)_____, which can make them a useful proxy for the concerns of society and stakeholders. NGOs range from small pressure groups on specific environmental concerns or human rights (4)_____, to educational charities, women's refuges, cultural associations, religious organisations, legal foundations, humanitarian assistance programmes – and the list could go on – to large international organisations with hundreds or even thousands of branches or members around the world.

SubQuestion No : 31

Q.31 Select the most appropriate option to fill in blank number 2.

- Ans ☒ 1. fact
- ☒ 2. value
- ☒ 3. clue
- ☒ 4. lie

Question ID : 264330128961

Status : Answered

Chosen Option : 1

Comprehension:

In the following passage, some words have been deleted. Read the passage carefully and select the most appropriate option to fill in each blank.

The phrase non-governmental or non-profit is commonly used to refer to the various organisations that (1)_____ civil society. In general, such organisations are distinguished by the (2)_____ that they operate for reasons other than financial gain. Surveys indicate that NGOs have a high degree of public (3)_____, which can make them a useful proxy for the concerns of society and stakeholders. NGOs range from small pressure groups on specific environmental concerns or human rights (4)_____, to educational charities, women's refuges, cultural associations, religious organisations, legal foundations, humanitarian assistance programmes – and the list could go on – to large international organisations with hundreds or even thousands of branches or members around the world.

SubQuestion No : 32

Q.32 Select the most appropriate option to fill in blank number 3.

- Ans ☒ 1. thought
☒ 2. trust
☒ 3. belief
☒ 4. idea

Question ID : 264330128962

Status : Answered

Chosen Option : 2

Comprehension:

In the following passage, some words have been deleted. Read the passage carefully and select the most appropriate option to fill in each blank.

The phrase non-governmental or non-profit is commonly used to refer to the various organisations that (1)_____ civil society. In general, such organisations are distinguished by the (2)_____ that they operate for reasons other than financial gain. Surveys indicate that NGOs have a high degree of public (3)_____, which can make them a useful proxy for the concerns of society and stakeholders. NGOs range from small pressure groups on specific environmental concerns or human rights (4)_____, to educational charities, women's refuges, cultural associations, religious organisations, legal foundations, humanitarian assistance programmes – and the list could go on – to large international organisations with hundreds or even thousands of branches or members around the world.

SubQuestion No : 33

Q.33 Select the most appropriate option to fill in blank number 4.

- Ans ☒ 1. evaluation
☒ 2. discrimination
☒ 3. prohibitions
☒ 4. violations

Question ID : 264330128963

Status : Answered

Chosen Option : 4

Comprehension:

Read the given passage and answer the questions that follow.

The sage of science, Einstein, was sitting in a depressive and pensive mood one evening. His eyes were brimming with tears. The pain was evident on his face. He peeped out of the window of his room. The sun had set a few minutes back. The sky was filled with a reddish glow. At this sunset, he felt that it was humanity that had sunk into devilish darkness and the reddish glow in the sky was the blood of humanity spilling all over the sky from earth. With tired steps, he walked back to his chair and settled down. It was the 9th of August 1945.

Three days back, he had felt the same agony as if someone had torn him apart. He was deeply hurt and depressed when he heard on the radio that America had dropped an atom bomb on the Japanese city, Hiroshima. Today, within three days another bomb was dropped on another city, Nagasaki and lakhs of people had been killed.

He had heard that the blast released so much energy that it had paled all past destructions in comparison and death had played out a pitiable dance of destruction. The flames that broke out of the bomb were burning, melting, and exploding buildings. Scared of the heat of the bomb, people had jumped into lakes and rivers, but the water was boiling and the people too were burnt and killed. The animals in the water were already boiled to death. Animals, trees, herbs, fragrant flowering plants were all turned into ashes. The atomic energy destruction had just not stopped there. It had entered the atmosphere there and had spread radiation that would affect people for generations to come and would also bring about destructive irreversible biological change in animals and plants.

As the news of the atomic attack reached Einstein, and he became aware of the glaring horror of the abuse of atomic energy, his distress and restlessness knew no bounds. He could not control himself and picked up his violin to turn his mind on to other things. While playing the violin, he tried to dissolve his distress in its sad notes, but couldn't. He was burning on the embers of destruction; his heart was filled with an ocean of agony and tears just continued streaming uncontrollably out of his eyes. Night had fallen. His daughter came up and asked him to eat something as he had not taken anything for the last four days. His voice was restrained and he said, "I don't feel like eating."

He could not sleep that night. Lying down, he was thinking how he had drawn the attention of the then American President Roosevelt towards the destructive powers of an atomic bomb. He had thought that this would be used to scare Hitler and put an end to the barbarism that Hitler was up to. However, Roosevelt kept him in the dark and made false promises.

Eventually, he had abused Einstein's equation of $E = mc^2$ that resulted in the destructive experiments. His actions had made science and scientists as murderers. Einstein kept on thinking for a long time. Eventually, he slipped into sleep. When he woke up at dawn, there was a new dawn in him too. The atomic threat had transformed his heart.

SubQuestion No : 34

Q.34 Why did Einstein refuse to eat?

- Ans**
- ☒ 1. As he felt happy
 - ☒ 2. As he felt worried
 - ☒ 3. As he felt guilty
 - ☒ 4. As he felt sick

Question ID : 264330128926

Status : Answered

Chosen Option : 3

Comprehension:

Read the given passage and answer the questions that follow.

The sage of science, Einstein, was sitting in a depressive and pensive mood one evening. His eyes were brimming with tears. The pain was evident on his face. He peeped out of the window of his room. The sun had set a few minutes back. The sky was filled with a reddish glow. At this sunset, he felt that it was humanity that had sunk into devilish darkness and the reddish glow in the sky was the blood of humanity spilling all over the sky from earth. With tired steps, he walked back to his chair and settled down. It was the 9th of August 1945.

Three days back, he had felt the same agony as if someone had torn him apart. He was deeply hurt and depressed when he heard on the radio that America had dropped an atom bomb on the Japanese city, Hiroshima. Today, within three days another bomb was dropped on another city, Nagasaki and lakhs of people had been killed.

He had heard that the blast released so much energy that it had paled all past destructions in comparison and death had played out a pitiable dance of destruction. The flames that broke out of the bomb were burning, melting, and exploding buildings. Scared of the heat of the bomb, people had jumped into lakes and rivers, but the water was boiling and the people too were burnt and killed. The animals in the water were already boiled to death. Animals, trees, herbs, fragrant flowering plants were all turned into ashes. The atomic energy destruction had just not stopped there. It had entered the atmosphere there and had spread radiation that would affect people for generations to come and would also bring about destructive irreversible biological change in animals and plants.

As the news of the atomic attack reached Einstein, and he became aware of the glaring horror of the abuse of atomic energy, his distress and restlessness knew no bounds. He could not control himself and picked up his violin to turn his mind on to other things. While playing the violin, he tried to dissolve his distress in its sad notes, but couldn't. He was burning on the embers of destruction; his heart was filled with an ocean of agony and tears just continued streaming uncontrollably out of his eyes. Night had fallen. His daughter came up and asked him to eat something as he had not taken anything for the last four days. His voice was restrained and he said, "I don't feel like eating."

He could not sleep that night. Lying down, he was thinking how he had drawn the attention of the then American President Roosevelt towards the destructive powers of an atomic bomb. He had thought that this would be used to scare Hitler and put an end to the barbarism that Hitler was up to. However, Roosevelt kept him in the dark and made false promises.

Eventually, he had abused Einstein's equation of $E = mc^2$ that resulted in the destructive experiments. His actions had made science and scientists as murderers. Einstein kept on thinking for a long time. Eventually, he slipped into sleep. When he woke up at dawn, there was a new dawn in him too. The atomic threat had transformed his heart.

SubQuestion No : 35

Q.35 Select an appropriate title for the passage.

Ans ✓ 1. War and Destruction

✗ 2. Death in Hiroshima

✗ 3. Einstein and his Violin

✗ 4. Atom Bombs

Question ID : 264330128925

Status : Answered

Chosen Option : 1

Comprehension:

Read the given passage and answer the questions that follow.

The sage of science, Einstein, was sitting in a depressive and pensive mood one evening. His eyes were brimming with tears. The pain was evident on his face. He peeped out of the window of his room. The sun had set a few minutes back. The sky was filled with a reddish glow. At this sunset, he felt that it was humanity that had sunk into devilish darkness and the reddish glow in the sky was the blood of humanity spilling all over the sky from earth. With tired steps, he walked back to his chair and settled down. It was the 9th of August 1945.

Three days back, he had felt the same agony as if someone had torn him apart. He was deeply hurt and depressed when he heard on the radio that America had dropped an atom bomb on the Japanese city, Hiroshima. Today, within three days another bomb was dropped on another city, Nagasaki and lakhs of people had been killed.

He had heard that the blast released so much energy that it had paled all past destructions in comparison and death had played out a pitiable dance of destruction. The flames that broke out of the bomb were burning, melting, and exploding buildings. Scared of the heat of the bomb, people had jumped into lakes and rivers, but the water was boiling and the people too were burnt and killed. The animals in the water were already boiled to death. Animals, trees, herbs, fragrant flowering plants were all turned into ashes. The atomic energy destruction had just not stopped there. It had entered the atmosphere there and had spread radiation that would affect people for generations to come and would also bring about destructive irreversible biological change in animals and plants.

As the news of the atomic attack reached Einstein, and he became aware of the glaring horror of the abuse of atomic energy, his distress and restlessness knew no bounds. He could not control himself and picked up his violin to turn his mind on to other things. While playing the violin, he tried to dissolve his distress in its sad notes, but couldn't. He was burning on the embers of destruction; his heart was filled with an ocean of agony and tears just continued streaming uncontrollably out of his eyes. Night had fallen. His daughter came up and asked him to eat something as he had not taken anything for the last four days. His voice was restrained and he said, "I don't feel like eating."

He could not sleep that night. Lying down, he was thinking how he had drawn the attention of the then American President Roosevelt towards the destructive powers of an atomic bomb. He had thought that this would be used to scare Hitler and put an end to the barbarism that Hitler was up to. However, Roosevelt kept him in the dark and made false promises.

Eventually, he had abused Einstein's equation of $E = mc^2$ that resulted in the destructive experiments. His actions had made science and scientists as murderers. Einstein kept on thinking for a long time. Eventually, he slipped into sleep. When he woke up at dawn, there was a new dawn in him too. The atomic threat had transformed his heart.

SubQuestion No : 36

Q.36 What is the central theme of the passage?

Ans

- ☒ 1. Einstein and his life
- ☒ 2. Atomic war and its consequences
- ☒ 3. Einstein and his love for music
- ☒ 4. Science and its bad side

Question ID : 264330128927

Status : Answered

Chosen Option : 4

Comprehension:

Read the given passage and answer the questions that follow.

The sage of science, Einstein, was sitting in a depressive and pensive mood one evening. His eyes were brimming with tears. The pain was evident on his face. He peeped out of the window of his room. The sun had set a few minutes back. The sky was filled with a reddish glow. At this sunset, he felt that it was humanity that had sunk into devilish darkness and the reddish glow in the sky was the blood of humanity spilling all over the sky from earth. With tired steps, he walked back to his chair and settled down. It was the 9th of August 1945.

Three days back, he had felt the same agony as if someone had torn him apart. He was deeply hurt and depressed when he heard on the radio that America had dropped an atom bomb on the Japanese city, Hiroshima. Today, within three days another bomb was dropped on another city, Nagasaki and lakhs of people had been killed.

He had heard that the blast released so much energy that it had paled all past destructions in comparison and death had played out a pitiable dance of destruction. The flames that broke out of the bomb were burning, melting, and exploding buildings. Scared of the heat of the bomb, people had jumped into lakes and rivers, but the water was boiling and the people too were burnt and killed. The animals in the water were already boiled to death. Animals, trees, herbs, fragrant flowering plants were all turned into ashes. The atomic energy destruction had just not stopped there. It had entered the atmosphere there and had spread radiation that would affect people for generations to come and would also bring about destructive irreversible biological change in animals and plants.

As the news of the atomic attack reached Einstein, and he became aware of the glaring horror of the abuse of atomic energy, his distress and restlessness knew no bounds. He could not control himself and picked up his violin to turn his mind on to other things. While playing the violin, he tried to dissolve his distress in its sad notes, but couldn't. He was burning on the embers of destruction; his heart was filled with an ocean of agony and tears just continued streaming uncontrollably out of his eyes. Night had fallen. His daughter came up and asked him to eat something as he had not taken anything for the last four days. His voice was restrained and he said, "I don't feel like eating."

He could not sleep that night. Lying down, he was thinking how he had drawn the attention of the then American President Roosevelt towards the destructive powers of an atomic bomb. He had thought that this would be used to scare Hitler and put an end to the barbarism that Hitler was up to. However, Roosevelt kept him in the dark and made false promises.

Eventually, he had abused Einstein's equation of $E = mc^2$ that resulted in the destructive experiments. His actions had made science and scientists as murderers. Einstein kept on thinking for a long time. Eventually, he slipped into sleep. When he woke up at dawn, there was a new dawn in him too. The atomic threat had transformed his heart.

SubQuestion No : 37

Q.37 Select the most appropriate **ANTONYM** of 'set' from the passage.

- Ans**
- ☒ 1. Stand
 - ☒ 2. Get up
 - ☒ 3. Rise
 - ☒ 4. Level

Question ID : 264330128928

Status : Answered

Chosen Option : 2

Comprehension:

Read the following passage and answer the questions given after it.

The Indian Space Research Organisation (ISRO) announced another successful mission. ISRO chairman S. Somanath said that three small satellites successfully separated and were injected into orbit.

ISRO had launched three small satellites powered by its SSLV-D2 launch vehicle from Satish Dhawan Space Centre at Sriharikota on February 10, 2023 at 09:18 AM IST. The launch vehicle was carrying EOS-07, Janus-1 & AzaadiSAT-2 satellites and aimed to inject them into a 450 km circular orbit. The launch took place at the first launch pad at SDSC SHAR, Sriharikota.

The SSLV-D2 had to take a 15 minutes flight to inject EOS-07, Janus-1 and AzaadiSAT-2 satellites into 450 km circular lower orbit. "It is configured with three solid propulsion stages and a velocity terminal module. It is a 34 m tall, 2 m diameter vehicle having a lift-off mass of 120 t," said ISRO. The EOS-07 satellite weighs 156.3 kg and is made by ISRO.

About 13 minutes into its flight, the SSLV rocket ejected EOS-07 and soon after that the other two satellites Janus-1 and AzaadiSAT-2 were ejected — all at an altitude of 450 km, said ISRO.

With the new rocket in its portfolio, ISRO will have three rockets — Polar Satellite Launch Vehicle (PSLV) and its variants (cost about Rs 200 crore), Geosynchronous Satellite Launch Vehicle (GSLV-MkII cost about Rs 272 crore and LVM3 Rs 434 crore) and SSLV (Development cost of three rockets about Rs 56 crore each) and production cost may go down later.

"New experiments include mm-Wave Humidity Sounder and Spectrum Monitoring Payload. Janus-1, a 10.2 kg satellite belongs to ANTARIS, USA. A 8.7 kg satellite AzaadiSAT-2 is a combined effort of about 750 girl students across India guided by Space Kidz India, Chennai," it added.

SSLV caters to the launch of up to 500 kg satellites to Low Earth Orbits on 'launch-on-demand' basis. "It provides low-cost access to Space, offers low turn-around time and flexibility in accommodating multiple satellites, and demands minimal launch infrastructure," as per a statement by ISRO

SubQuestion No : 38

Q.38 Which satellite was injected into the orbit first?

- Ans** ☒ 1. EOS-07
☐ 2. Janus 1
☐ 3. AzaadiSAT-2
☐ 4. Antaris

Question ID : 264330128792

Status : Answered

Chosen Option : 1

Comprehension:

Read the following passage and answer the questions given after it.

The Indian Space Research Organisation (ISRO) announced another successful mission. ISRO chairman S. Somanath said that three small satellites successfully separated and were injected into orbit.

ISRO had launched three small satellites powered by its SSLV-D2 launch vehicle from Satish Dhawan Space Centre at Sriharikota on February 10, 2023 at 09:18 AM IST. The launch vehicle was carrying EOS-07, Janus-1 & AzaadiSAT-2 satellites and aimed to inject them into a 450 km circular orbit. The launch took place at the first launch pad at SDSC SHAR, Sriharikota.

The SSLV-D2 had to take a 15 minutes flight to inject EOS-07, Janus-1 and AzaadiSAT-2 satellites into 450 km circular lower orbit. "It is configured with three solid propulsion stages and a velocity terminal module. It is a 34 m tall, 2 m diameter vehicle having a lift-off mass of 120 t," said ISRO. The EOS-07 satellite weighs 156.3 kg and is made by ISRO.

About 13 minutes into its flight, the SSLV rocket ejected EOS-07 and soon after that the other two satellites Janus-1 and AzaadiSAT-2 were ejected — all at an altitude of 450 km, said ISRO.

With the new rocket in its portfolio, ISRO will have three rockets — Polar Satellite Launch Vehicle (PSLV) and its variants (cost about Rs 200 crore), Geosynchronous Satellite Launch Vehicle (GSLV-MkII cost about Rs 272 crore and LVM3 Rs 434 crore) and SSLV (Development cost of three rockets about Rs 56 crore each) and production cost may go down later.

"New experiments include mm-Wave Humidity Sounder and Spectrum Monitoring Payload. Janus-1, a 10.2 kg satellite belongs to ANTARIS, USA. A 8.7 kg satellite AzaadiSAT-2 is a combined effort of about 750 girl students across India guided by Space Kidz India, Chennai," it added.

SSLV caters to the launch of up to 500 kg satellites to Low Earth Orbits on 'launch-on-demand' basis. "It provides low-cost access to Space, offers low turn-around time and flexibility in accommodating multiple satellites, and demands minimal launch infrastructure," as per a statement by ISRO

SubQuestion No : 39

Q.39 Match the satellites with their weight.

Satellites Weight

- a. EOS-07 1. 10.2 kg
- b. AzaadiSAT-2 2. 156.3
- c. Janus 1 3. 8.7 kg

- Ans**
- ☒ 1. a-2, b-1, c-3
 - ☒ 2. a-1, b-3, c-2
 - ☒ 3. a-2, b-3, c-1
 - ☒ 4. a-3, b-1, c-2

Question ID : 264330128793

Status : Answered

Chosen Option : 3

Comprehension:

Read the following passage and answer the questions given after it.

The Indian Space Research Organisation (ISRO) announced another successful mission. ISRO chairman S. Somanath said that three small satellites successfully separated and were injected into orbit.

ISRO had launched three small satellites powered by its SSLV-D2 launch vehicle from Satish Dhawan Space Centre at Sriharikota on February 10, 2023 at 09:18 AM IST. The launch vehicle was carrying EOS-07, Janus-1 & AzaadiSAT-2 satellites and aimed to inject them into a 450 km circular orbit. The launch took place at the first launch pad at SDSC SHAR, Sriharikota.

The SSLV-D2 had to take a 15 minutes flight to inject EOS-07, Janus-1 and AzaadiSAT-2 satellites into 450 km circular lower orbit. "It is configured with three solid propulsion stages and a velocity terminal module. It is a 34 m tall, 2 m diameter vehicle having a lift-off mass of 120 t," said ISRO. The EOS-07 satellite weighs 156.3 kg and is made by ISRO.

About 13 minutes into its flight, the SSLV rocket ejected EOS-07 and soon after that the other two satellites Janus-1 and AzaadiSAT-2 were ejected — all at an altitude of 450 km, said ISRO.

With the new rocket in its portfolio, ISRO will have three rockets — Polar Satellite Launch Vehicle (PSLV) and its variants (cost about Rs 200 crore), Geosynchronous Satellite Launch Vehicle (GSLV-MkII cost about Rs 272 crore and LVM3 Rs 434 crore) and SSLV (Development cost of three rockets about Rs 56 crore each) and production cost may go down later.

"New experiments include mm-Wave Humidity Sounder and Spectrum Monitoring Payload. Janus-1, a 10.2 kg satellite belongs to ANTARIS, USA. A 8.7 kg satellite AzaadiSAT-2 is a combined effort of about 750 girl students across India guided by Space Kidz India, Chennai," it added.

SSLV caters to the launch of up to 500 kg satellites to Low Earth Orbits on 'launch-on-demand' basis. "It provides low-cost access to Space, offers low turn-around time and flexibility in accommodating multiple satellites, and demands minimal launch infrastructure," as per a statement by ISRO

SubQuestion No : 40

Q.40 What is the passage mainly about?

- Ans** ☒ 1. new experiments on satellites by ISRO
- ☒ 2. launch of three small satellites in orbit by ISRO
- ☒ 3. development of SSLV rocket by ISRO
- ☒ 4. efforts to cut costs of satellites by ISRO

Question ID : 264330128791

Status : Answered

Chosen Option : 3

Comprehension:

Read the following passage and answer the questions given after it.

The Indian Space Research Organisation (ISRO) announced another successful mission.

ISRO chairman S. Somanath said that three small satellites successfully separated and were injected into orbit.

ISRO had launched three small satellites powered by its SSLV-D2 launch vehicle from Satish Dhawan Space Centre at Sriharikota on February 10, 2023 at 09:18 AM IST. The launch vehicle was carrying EOS-07, Janus-1 & AzaadiSAT-2 satellites and aimed to inject them into a 450 km circular orbit. The launch took place at the first launch pad at SDSC SHAR, Sriharikota.

The SSLV-D2 had to take a 15 minutes flight to inject EOS-07, Janus-1 and AzaadiSAT-2 satellites into 450 km circular lower orbit. "It is configured with three solid propulsion stages and a velocity terminal module. It is a 34 m tall, 2 m diameter vehicle having a lift-off mass of 120 t," said ISRO. The EOS-07 satellite weighs 156.3 kg and is made by ISRO.

About 13 minutes into its flight, the SSLV rocket ejected EOS-07 and soon after that the other two satellites Janus-1 and AzaadiSAT-2 were ejected — all at an altitude of 450 km, said ISRO.

With the new rocket in its portfolio, ISRO will have three rockets — Polar Satellite Launch Vehicle (PSLV) and its variants (cost about Rs 200 crore), Geosynchronous Satellite Launch Vehicle (GSLV-MkII cost about Rs 272 crore and LVM3 Rs 434 crore) and SSLV (Development cost of three rockets about Rs 56 crore each) and production cost may go down later.

"New experiments include mm-Wave Humidity Sounder and Spectrum Monitoring Payload.

Janus-1, a 10.2 kg satellite belongs to ANTARIS, USA. A 8.7 kg satellite AzaadiSAT-2 is a combined effort of about 750 girl students across India guided by Space Kidz India, Chennai," it added.

SSLV caters to the launch of up to 500 kg satellites to Low Earth Orbits on 'launch-on-demand' basis. "It provides low-cost access to Space, offers low turn-around time and flexibility in accommodating multiple satellites, and demands minimal launch infrastructure," as per a statement by ISRO

SubQuestion No : 41

Q.41 After reading the passage it can be inferred that it is

- Ans** ☒ 1. a government release
- ☒ 2. a news item
- ☒ 3. a magazine article
- ☒ 4. an editorial

Question ID : **264330128790**

Status : **Not Answered**

Chosen Option : --

Comprehension:

Read the following passage and answer the questions given after it.

Wetlands are amongst the most productive ecosystems on the Earth and provide many important services to human society. They exhibit enormous diversity according to their genesis, geographical location, water regime and chemistry, dominant species, and soil and sediment characteristics. Globally, the areal extent of wetland ecosystems ranges from 917 million hectares (m ha) to more than 1275 m ha. One of the first widely used wetland classifications systems, devised by Cowardin et al., 1979, categorized wetlands into marine (coastal wetlands), estuarine (including deltas, tidal marshes, and mangrove swamps), lacustrine (lakes), riverine (along rivers and streams), and palustrine (marshes, swamps and bogs) based on their hydrological, ecological and geological characteristics.

Ramsar Convention on Wetlands was an international treaty signed in 1971. Overall, 1052 sites in Europe; 289 sites in Asia; 359 sites in Africa; 175 sites in South America; 211 sites in North America; and 79 sites in Oceania region have been identified as Ramsar sites or wetlands of International importance.

As per the Ramsar Convention definition most of the natural water bodies (such as rivers, lakes, coastal lagoons, mangroves, peat land, coral reefs) and man-made wetlands (such as ponds, farm ponds, irrigated fields, sacred groves, salt pans, reservoirs, gravel pits, sewage farms and canals) in India constitute the wetland ecosystem distributed in different geographical regions ranging from Himalayas to Deccan plateau. As of February, 2022, India has 49 Ramsar sites covering an area of 10,93,636 hectares, the highest in South Asia.

As per the estimates, India has about 757.06 thousand wetlands with a total wetland area of 15.3 m ha, accounting for nearly 4.7% of the total geographical area of the country. Out of this, areas under inland wetlands accounts for 69%, coastal wetlands 27%, and other wetlands (smaller than 2.25 ha) 4%.

Gujarat has the highest proportion (17.5%) and Mizoram has the lowest proportion (0.66%) of the area under wetlands. Among Union Territories, Lakshadweep has the highest proportion (around 96%) and Chandigarh has the least proportion (3%) of geographical area under wetlands.

SubQuestion No : 42

Q.42 Which of the following questions cannot be answered after reading the above passage?

- Ans**
- ☒ 1. How many Ramsar sites are there in the world?
 - ☒ 2. What is the classification of wetlands?
 - ☒ 3. Why are wetlands important for human societies?
 - ☒ 4. How much area is covered by wetlands In India?

Question ID : 264330128830

Status : Answered

Chosen Option : 1

Comprehension:

Read the following passage and answer the questions given after it.

Wetlands are amongst the most productive ecosystems on the Earth and provide many important services to human society. They exhibit enormous diversity according to their genesis, geographical location, water regime and chemistry, dominant species, and soil and sediment characteristics. Globally, the areal extent of wetland ecosystems ranges from 917 million hectares (m ha) to more than 1275 m ha. One of the first widely used wetland classifications systems, devised by Cowardin et al., 1979, categorized wetlands into marine (coastal wetlands), estuarine (including deltas, tidal marshes, and mangrove swamps), lacustrine (lakes), riverine (along rivers and streams), and palustrine (marshes, swamps and bogs) based on their hydrological, ecological and geological characteristics.

Ramsar Convention on Wetlands was an international treaty signed in 1971. Overall, 1052 sites in Europe; 289 sites in Asia; 359 sites in Africa; 175 sites in South America; 211 sites in North America; and 79 sites in Oceania region have been identified as Ramsar sites or wetlands of International importance.

As per the Ramsar Convention definition most of the natural water bodies (such as rivers, lakes, coastal lagoons, mangroves, peat land, coral reefs) and man-made wetlands (such as ponds, farm ponds, irrigated fields, sacred groves, salt pans, reservoirs, gravel pits, sewage farms and canals) in India constitute the wetland ecosystem distributed in different geographical regions ranging from Himalayas to Deccan plateau. As of February, 2022, India has 49 Ramsar sites covering an area of 10,93,636 hectares, the highest in South Asia.

As per the estimates, India has about 757.06 thousand wetlands with a total wetland area of 15.3 m ha, accounting for nearly 4.7% of the total geographical area of the country. Out of this, areas under inland wetlands accounts for 69%, coastal wetlands 27%, and other wetlands (smaller than 2.25 ha) 4%.

Gujarat has the highest proportion (17.5%) and Mizoram has the lowest proportion (0.66%) of the area under wetlands. Among Union Territories, Lakshadweep has the highest proportion (around 96%) and Chandigarh has the least proportion (3%) of geographical area under wetlands.

SubQuestion No : 43

Q.43 Match the continents with the number of Ramsar sites.

continents no. of Ramsar sites

a. North America 1. 1052 sites

b. Europe 2. 211sites

c. Africa 3. 289 sites

d. Asia 4. 359 sites

Ans ✓ 1. a-2, b-1, c-4, d-3

✗ 2. a-2, b-3, c-4, d-1

✗ 3. a-4, b-1, c-2, d-3

✗ 4. a-3, b-4, c-1, d-2

Question ID : 264330128832

Status : Answered

Chosen Option : 1

Comprehension:

Read the following passage and answer the questions given after it.

Wetlands are amongst the most productive ecosystems on the Earth and provide many important services to human society. They exhibit enormous diversity according to their genesis, geographical location, water regime and chemistry, dominant species, and soil and sediment characteristics. Globally, the areal extent of wetland ecosystems ranges from 917 million hectares (m ha) to more than 1275 m ha. One of the first widely used wetland classifications systems, devised by Cowardin et al., 1979, categorized wetlands into marine (coastal wetlands), estuarine (including deltas, tidal marshes, and mangrove swamps), lacustrine (lakes), riverine (along rivers and streams), and palustrine (marshes, swamps and bogs) based on their hydrological, ecological and geological characteristics.

Ramsar Convention on Wetlands was an international treaty signed in 1971. Overall, 1052 sites in Europe; 289 sites in Asia; 359 sites in Africa; 175 sites in South America; 211 sites in North America; and 79 sites in Oceania region have been identified as Ramsar sites or wetlands of International importance.

As per the Ramsar Convention definition most of the natural water bodies (such as rivers, lakes, coastal lagoons, mangroves, peat land, coral reefs) and man-made wetlands (such as ponds, farm ponds, irrigated fields, sacred groves, salt pans, reservoirs, gravel pits, sewage farms and canals) in India constitute the wetland ecosystem distributed in different geographical regions ranging from Himalayas to Deccan plateau. As of February, 2022, India has 49 Ramsar sites covering an area of 10,93,636 hectares, the highest in South Asia.

As per the estimates, India has about 757.06 thousand wetlands with a total wetland area of 15.3 m ha, accounting for nearly 4.7% of the total geographical area of the country. Out of this, areas under inland wetlands accounts for 69%, coastal wetlands 27%, and other wetlands (smaller than 2.25 ha) 4%.

Gujarat has the highest proportion (17.5%) and Mizoram has the lowest proportion (0.66%) of the area under wetlands. Among Union Territories, Lakshadweep has the highest proportion (around 96%) and Chandigarh has the least proportion (3%) of geographical area under wetlands.

SubQuestion No : 44

Q.44 In India, what kind of wetlands occupy the largest area?

- Ans**
- ☒ 1. coastal wetlands
 - ☒ 2. mangrove swamps
 - ☒ 3. inland wetlands
 - ☒ 4. small wetlands

Question ID : 264330128833

Status : Answered

Chosen Option : 3

Comprehension:

Read the following passage and answer the questions given after it.

Wetlands are amongst the most productive ecosystems on the Earth and provide many important services to human society. They exhibit enormous diversity according to their genesis, geographical location, water regime and chemistry, dominant species, and soil and sediment characteristics. Globally, the areal extent of wetland ecosystems ranges from 917 million hectares (m ha) to more than 1275 m ha. One of the first widely used wetland classifications systems, devised by Cowardin et al., 1979, categorized wetlands into marine (coastal wetlands), estuarine (including deltas, tidal marshes, and mangrove swamps), lacustrine (lakes), riverine (along rivers and streams), and palustrine (marshes, swamps and bogs) based on their hydrological, ecological and geological characteristics.

Ramsar Convention on Wetlands was an international treaty signed in 1971. Overall, 1052 sites in Europe; 289 sites in Asia; 359 sites in Africa; 175 sites in South America; 211 sites in North America; and 79 sites in Oceania region have been identified as Ramsar sites or wetlands of International importance.

As per the Ramsar Convention definition most of the natural water bodies (such as rivers, lakes, coastal lagoons, mangroves, peat land, coral reefs) and man-made wetlands (such as ponds, farm ponds, irrigated fields, sacred groves, salt pans, reservoirs, gravel pits, sewage farms and canals) in India constitute the wetland ecosystem distributed in different geographical regions ranging from Himalayas to Deccan plateau. As of February, 2022, India has 49 Ramsar sites covering an area of 10,93,636 hectares, the highest in South Asia.

As per the estimates, India has about 757.06 thousand wetlands with a total wetland area of 15.3 m ha, accounting for nearly 4.7% of the total geographical area of the country. Out of this, areas under inland wetlands accounts for 69%, coastal wetlands 27%, and other wetlands (smaller than 2.25 ha) 4%.

Gujarat has the highest proportion (17.5%) and Mizoram has the lowest proportion (0.66%) of the area under wetlands. Among Union Territories, Lakshadweep has the highest proportion (around 96%) and Chandigarh has the least proportion (3%) of geographical area under wetlands.

SubQuestion No : 45

Q.45 Under which category of wetlands, are delta and mangrove swamps included?

- Ans**
- ☒ 1. marine
 - ☒ 2. estuarine
 - ☐ 3. lacustrine
 - ☐ 4. palustrine

Question ID : 264330128831

Status : Answered

Chosen Option : 2

Section : General Awareness

Q.1 The national census does NOT recognise _____ groups within India.

- Ans**
- ☐ 1. tribal
 - ☒ 2. ethnic
 - ☐ 3. religious
 - ☐ 4. scheduled caste

Question ID : 264330109503

Status : Answered

Chosen Option : 2

Q.2 Article 148 of the Constitution of India provides for an independent office of the _____.

- Ans**
- ☒ 1. Attorney General of India
 - ☒ 2. President of India
 - ☒ 3. Comptroller and Auditor General of India
 - ☒ 4. Advocate General of the State

Question ID : 264330113408
Status : Not Answered
Chosen Option : --

Q.3 Following statements are made regarding global warming.

- A.** Global warming is the long-term heating of Earth's surface observed since the pre-industrial period due to human activities, primarily fossil fuel burning, which increases heat-trapping greenhouse gas levels in Earth's atmosphere.
- B.** Global warming causes climate change, which poses a serious threat to life on Earth in the forms of widespread flooding and extreme weather.

Which of these statements are correct?

- Ans**
- ☒ 1. Only B
 - ☒ 2. Only A
 - ☒ 3. Both A & B
 - ☒ 4. Both A & B are incorrect

Question ID : 264330121159
Status : Answered
Chosen Option : 3

Q.4 In August 2021, the Ministry of Labour and Employment launched the _____ portal for creating a National Database of Unorganized Workers (UWs).

- Ans**
- ☒ 1. eUmang
 - ☒ 2. eRozgaar
 - ☒ 3. eGyan
 - ☒ 4. eShram

Question ID : 264330123896
Status : Not Answered
Chosen Option : --

Q.5 Plants that do not have well-differentiated body design fall in this group. The plants in this group are commonly called algae. These plants are predominantly aquatic.

- Ans**
- ☒ 1. Bryophyta
 - ☒ 2. Angiosperms
 - ☒ 3. Thallophyta
 - ☒ 4. Pteridophyta

Question ID : 26433055772
Status : Not Answered
Chosen Option : --

Q.6 Which artificial element has been provisionally named seaborgium by American researchers in honour of Nobel Laureate Glenn T Seaborg?

- Ans** ☒ 1. Element 97
☒ 2. Element 106
☒ 3. Element 90
☒ 4. Element 103

Question ID : 264330123826
Status : Not Answered
Chosen Option : --

Q.7 Match List-I and List-II regarding the medal tally in National Games 2022.

- | List-I (Team) | List-II (Medals) |
|------------------|--|
| a) Services team | i) Highest Number of Medals (Including Gold, Silver, bronze) |
| b) Maharashtra | ii) Highest Number of Gold Medals in the entire games |
| c) Haryana | iii) 3 rd position in medal tally (according to the number gold medals) |
| d) Karnataka | iv) 4 th position in medal tally (according to the number gold medals) |

- Ans** ☒ 1. a-ii, b-i, c-iii, d-iv
☒ 2. a-ii, b-i, c-iv, d-iii
☒ 3. a-i, b-ii, c-iii, d-iv
☒ 4. a-i, b-ii, c-iv, d-iii

Question ID : 264330122947
Status : Answered
Chosen Option : 3

Q.8 Who explained the structure and reproductive system of algae in 1935?

- Ans** ☒ 1. MOP Iyengar
☒ 2. FE Fritsch
☒ 3. William Henry
☒ 4. Carolus Linnaeus

Question ID : 264330123824
Status : Not Answered
Chosen Option : --

Q.9 Which of the following is correct about uniform acceleration?

- Ans** ☒ 1. An object moving on friction-less surface can gain uniform acceleration.
☒ 2. An object under free fall is an example of uniform acceleration.
☒ 3. An object moving with constant speed is an example of uniform acceleration.
☒ 4. Motion of a spring is an example of uniform acceleration.

Question ID : 26433054900
Status : Answered
Chosen Option : 2

Q.10 The induced current is the highest when the direction of motion of the coil is:

- Ans**
- ☐ 1. not at right angles to the magnetic field
 - ☐ 2. at right angles to the electricity
 - ☐ 3. at right angles to the electric source
 - ☒ 4. at right angles to the magnetic field

Question ID : 264330123852

Status : Not Answered

Chosen Option : --

Q.11 Hydrogen resembles the properties of which two groups of the periodic table?

- Ans**
- ☐ 1. Group 2 and group 17
 - ☐ 2. Group 1 and group 3
 - ☒ 3. Group 1 and group 17
 - ☐ 4. Group 2 and group 4

Question ID : 26433086702

Status : Not Answered

Chosen Option : --

Q.12 Which is a specialised excretory cell found in Platyhelminthes that acts like a kidney, removing waste material through filtration?

- Ans**
- ☐ 1. Fat cell
 - ☒ 2. Flame cell
 - ☐ 3. Stem cell
 - ☐ 4. Sponge cell

Question ID : 264330123822

Status : Not Answered

Chosen Option : --

Q.13 Who among the following was the President of the Indian National Congress during the 1915 session?

- Ans**
- ☒ 1. Satyendra Prasanna Sinha
 - ☐ 2. Ambica Charan Mazumdar
 - ☐ 3. Bhupendra Nath Bose
 - ☐ 4. Madan Mohan Malaviya

Question ID : 264330123887

Status : Not Answered

Chosen Option : --

Q.14 Which officer under Alauddin Khilji was required to maintain a register of merchants to ensure an adequate supply of goods?

- Ans**
- ☐ 1. Nazir
 - ☐ 2. Rais Parwana
 - ☐ 3. Muhtasib
 - ☒ 4. Shahna-i-Mandi

Question ID : **264330109012**
Status : **Not Answered**
Chosen Option : --

Q.15 Which of the following statements is/are true?
(A) COP28 is proposed to be held in New Delhi, India.
(B) The first UN Climate Change Conference was held in 1995.
(C) The first UN Climate Change Conference was held in Paris, France.

- Ans**
- ☐ 1. Only A
 - ☐ 2. A and B
 - ☐ 3. B and C
 - ☒ 4. Only B

Question ID : **264330121480**
Status : **Not Answered**
Chosen Option : --

Q.16 How many types of writs can be issued under Article 32 and 226 of the Constitution of India?

- Ans**
- ☐ 1. Four
 - ☐ 2. Six
 - ☒ 3. Five
 - ☐ 4. Seven

Question ID : **264330110791**
Status : **Not Answered**
Chosen Option : --

Q.17 In India, who among the following is responsible for auditing all receipts and expenditure of the Union and State governments?

- Ans**
- ☐ 1. Attorney General for India
 - ☐ 2. Advocate General
 - ☐ 3. Union Public Service Commission
 - ☒ 4. Comptroller and Auditor- General

Question ID : **264330110129**
Status : **Answered**
Chosen Option : **4**

Q.18 Which of the following launched NEAT 3.0 to provide best developed ed-tech solutions, in January 2022?

- Ans**
- ☒ 1. Ministry of Law and Justice
 - ☒ 2. Ministry of Electronics and Information Technology
 - ☒ 3. Ministry of Social Justice and Empowerment
 - ☒ 4. Ministry of Education

Question ID : **26433082822**
Status : **Answered**
Chosen Option : **2**

Q.19 Name the hot, dry oppressing winds that blow in between Delhi and Patna.

- Ans**
- ☒ 1. Nor westers
 - ☒ 2. Mango shower
 - ☒ 3. Blossom shower
 - ☒ 4. Loo

Question ID : **264330123841**
Status : **Not Answered**
Chosen Option : **--**

Q.20 In India, according to the Insolvency and Bankruptcy Code, 2016, the process of insolvency resolution for companies should be completed in how many days?

- Ans**
- ☒ 1. 180
 - ☒ 2. 150
 - ☒ 3. 170
 - ☒ 4. 120

Question ID : **26433059320**
Status : **Answered**
Chosen Option : **1**

Q.21 Match the columns.

Season	Month according to Indian calendar
(A) Vasanta	(I) Chaitra-Vaisakha
(B) Grishma	(II) Asvina-Kartika
(C) Varsha	(III) Sravana-Bhadra
(D) Sharada	(IV) Jyaistha-Asadha

- Ans**
- ☒ 1. A-I, B-IV, C-III, D-II
 - ☒ 2. A-II, B-III, C-IV, D-I
 - ☒ 3. A-IV, B-I, C-III, D-II
 - ☒ 4. A-IV, B-III, C-I, D-II

Question ID : **264330121529**
Status : **Not Answered**
Chosen Option : **--**

Q.22 Pushyamitra, who was the commander of Brihadratha, the last Mauryan emperor, killed the king and established a new dynasty. Which of the following was his dynasty?

- Ans** ✓ 1. Shunga
✗ 2. Kanva
✗ 3. Satavahana
✗ 4. Chedi

Question ID : 264330123891
Status : Not Answered
Chosen Option : --

Q.23 Match the columns.

Institutions

Headquarters

- | | |
|---|----------------|
| (A) ICAR-Central Institute for Arid Horticulture | (I) Bikaner |
| (B) ICAR-Central Institute of Cotton Research | (II) Nagpur |
| (C) ICAR-National Rice Research Institute | (III) Cuttack |
| (D) ICAR-Indian Institute of Horticultural Research | (IV) Bengaluru |

- Ans** ✓ 1. A-I, B-II, C-III, D-IV
✗ 2. A-I, B-II, C-IV, D-III
✗ 3. A-IV, B-III, C-I, D-II
✗ 4. A-IV, B-III, C-II, D-I

Question ID : 264330121515
Status : Not Answered
Chosen Option : --

Q.24 The Reserve Bank of India introduced a comprehensive regulatory framework for NBFC-MFI on _____.

- Ans** ✗ 1. 10 December 2015
✓ 2. 2 December 2011
✗ 3. 8 December 2013
✗ 4. 5 December 2012

Question ID : 264330123880
Status : Not Answered
Chosen Option : --

Q.25 Which of the following statements is/are correct regarding the Multi-State Co-operative Societies (Amendment) Bill, 2022?

- A. The Lok Sabha referred this Bill to the joint committee of parliament comprising 21 members from the Lower House and 10 from the Upper House.
B. This Bill also proposed to establish a 'Cooperative Election Authority' to bring electoral reforms.
C. The Bill also has a Section — 63A that relates to 'establishment of the Cooperative Rehabilitation, Reconstruction and Development Fund' for revival of 'sick multi-state cooperative societies'.

- Ans** ☒ 1. A and B only
☒ 2. B and C only
☒ 3. A, B and C
☒ 4. A and C only

Question ID : 264330122934

Status : Not Answered

Chosen Option : --

Section : Computer Knowledge Module

Q.1 A _____ can either be malware or hardware. The main purpose of this malware is to record the keys pressed by a user on the keyboard.

- Ans** ☒ 1. Keyloggers
☒ 2. Roolkit
☒ 3. Worm
☒ 4. Trojan

Question ID : 264330128748

Status : Not Answered

Chosen Option : --

Q.2 A _____ port transmits one bit of a byte at a time as a single stream of bits. It is meant for transmitting slow data over long distances.

- Ans** ☒ 1. Parallel
☒ 2. Universal Serial Bus
☒ 3. Serial
☒ 4. Display

Question ID : 264330128706

Status : Not Answered

Chosen Option : --

Q.3 _____ Which of the following is also known as a flash drive?

- Ans
- ☐ 1. Disk Array
 - ☐ 2. HDD
 - ☐ 3. SSD
 - ☒ 4. Pen drive

Question ID : 264330128702
Status : Answered
Chosen Option : 4

Q.4 Which of the following keyboard shortcut is used to close a MS-Word 365 document?

- Ans
- ☐ 1. Ctrl + F3
 - ☐ 2. Alt + F3
 - ☒ 3. Alt + F4
 - ☐ 4. Shift + F5

Question ID : 264330128753
Status : Answered
Chosen Option : 2

Q.5 Which among the following is incorrect about cache memory?

- Ans
- ☒ 1. It is slower than the main memory.
 - ☐ 2. It keeps the programs that can be run in a short amount of time.
 - ☐ 3. It acts as a high speed buffer between CPU and main memory.
 - ☐ 4. It stores data in temporary use.

Question ID : 264330128701
Status : Not Answered
Chosen Option : --

Q.6 Which among the following keyboard shortcut can be used to open Windows Explorer?

- Ans
- ☒ 1. Windows Key + E
 - ☐ 2. Windows Key + R
 - ☐ 3. Windows Key + X
 - ☐ 4. Windows Key + W

Question ID : 264330128690
Status : Not Answered
Chosen Option : --

Q.7 A _____ is a networking device that filters network traffic while connecting multiple computers or communicating devices.

- Ans**
- ☒ 1. Repeater
 - ☒ 2. Distributor
 - ☒ 3. Switch
 - ☒ 4. Router

Question ID : **264330128707**
Status : **Answered**
Chosen Option : **4**

Q.8 _____ server acts as a set of components accessible to the software developer through an API defined by the platform itself.

- Ans**
- ☒ 1. Application
 - ☒ 2. Mail
 - ☒ 3. File Transfer Protocol (FTP)
 - ☒ 4. Database

Question ID : **264330128697**
Status : **Answered**
Chosen Option : **1**

Q.9 A _____ is a contagious program or code that attaches itself to another piece of software, and then reproduces itself when that software is run.

- Ans**
- ☒ 1. Trojan
 - ☒ 2. virus
 - ☒ 3. adware
 - ☒ 4. spyware

Question ID : **264330128754**
Status : **Answered**
Chosen Option : **2**

Q.10 Which among the following keyboard shortcuts open the properties for the selected item on a Windows 10 home screen?

- Ans**
- ☒ 1. Alt + Shift + Spacebar
 - ☒ 2. Ctrl + Shift + Spacebar
 - ☒ 3. Alt + Enter
 - ☒ 4. Ctrl + Enter

Question ID : **264330128703**
Status : **Not Answered**
Chosen Option : **--**

Q.11 Which of the following shortcut key is used to quickly create a new, blank workbook in MS-Excel 2010?

- Ans**
- ✓ 1. Ctrl + N
 - ✗ 2. Alt + Shift + W
 - ✗ 3. Alt + Shift + N
 - ✗ 4. Ctrl + W

Question ID : 264330128689
Status : Answered
Chosen Option : 1

Q.12 _____ is a reading device that reads printed text by scanning it character by character.

- Ans**
- ✗ 1. Track Ball
 - ✗ 2. Digitizer
 - ✗ 3. Magnetic Ink Card Reader (MICR)
 - ✓ 4. Optical Character Reader (OCR)

Question ID : 264330128764
Status : Answered
Chosen Option : 4

Q.13 Consider the following statement about MATCH() function of MS-Excel 2010:

P: It searches for a specified item in a range of cells, and then returns the relative position of that item in the range.

Q: The MATCH function syntax is MATCH(lookup_value, lookup_array, [match_type])

R: All the arguments in a MATCH() function are required.

Which of the following statement(s) is/are true

- Ans**
- ✗ 1. Only Q
 - ✗ 2. All P, Q, R
 - ✗ 3. Only P and R
 - ✓ 4. Only P and Q

Question ID : 264330128691
Status : Not Answered
Chosen Option : --

Q.14 Which among the following statements is incorrect about Central Processing Unit?

Ans ☒ 1.

Control Unit controls the order in which instructions enter and leave the processor and how the instructions are executed.

☒ 2.

Arithmetic Logic Unit is responsible for taking the input, converting it into a signal, and storing it for further processing.

☒ 3.

Arithmetic Logic Unit is also known as the mathematical brain of a computer.

☒ 4. Control Unit directs and manages operation sequences.

Question ID : 264330128700

Status : Not Answered

Chosen Option : --

Q.15 Which among the following registers in Instruction Cycle holds the last instruction fetched?

Ans ☒ 1. Memory Address Register (MAR)

☒ 2. Instruction Register (IR)

☒ 3. Program Counter (PC)

☒ 4. Memory Buffer Register (MBR)

Question ID : 264330128759

Status : Not Answered

Chosen Option : --

Q.16 In Gmail, what do you use when you receive a mail and want to send the mail in response of the same mail and to the original sender only?

Ans ☒ 1. Forward

☒ 2. Both Reply and Forward

☒ 3. Reply All

☒ 4. Reply

Question ID : 264330128696

Status : Answered

Chosen Option : 4

Q.17 Which of the following is not a magnetic disk?

Ans ☒ 1. Disk pack

☒ 2. DVD

☒ 3. Winchester disk

☒ 4. Zip disk

Question ID : 264330128705

Status : Not Answered

Chosen Option : --

Q.18 Which of the following buttons are present in the Quick Access Toolbar by default in MS-Word 2010?

- Ans**
- ☒ 1. Undo, Redo, Name
 - ☒ 2. Undo, Redo, Cut
 - ☒ 3. Paste, Redo, Copy
 - ☒ 4. Save, Undo, Redo

Question ID : 264330128695

Status : Answered

Chosen Option : 3

Q.19 Which among the following statements is incorrect?

- Ans**
- ☒ 1. Memory is required in the webserver to downloading anything.
 - ☒ 2. Uploading is a procedure for copying data from the device to the webserver.
 - ☒ 3. Data travels from user's device to the web server while uploading.
 - ☒ 4. Downloading is a procedure of copying files from the webserver to the machine.

Question ID : 264330128692

Status : Answered

Chosen Option : 1

Q.20 Which of the following Internet protocol specifies how data is exchanged over the Internet and how it should be broken into IP packets?

- Ans**
- ☒ 1. PPP
 - ☒ 2. HTTP
 - ☒ 3. TCP
 - ☒ 4. SMTP

Question ID : 264330128758

Status : Answered

Chosen Option : 3

Combined Graduate Level Examination Tier II 2022

Roll Number	
Candidate Name	
Venue Name	iON Digital Zone iDZ Keshaw Puram
Exam Date	07/03/2023
Exam Time	9:00 AM - 12:00 PM
Subject	CGLE 2022 Tier II Paper I

Section : Mathematical Abilities

Q.1 Find the average of the following sets of numbers.
693, 456, 876, 532, 934, 691, 596, 398, 682

Ans ☒ 1. 550.50

☒ 2. 750.80

☒ 3. 650.89

☒ 4. 725.90

Question ID : 26433061239

Status : Answered

Chosen Option : 3

Q.2 The largest three-digit number that gives the same remainder 2 when divided by 3, 5 and 9 is _____.

Ans ☒ 1. 999

☒ 2. 984

☒ 3. 998

☒ 4. 992

Question ID : 26433085415

Status : Answered

Chosen Option : 4

Q.3 A person can hit a target 5 times out of 8 shots. If he fires 10 shots, what is the probability that he will hit the target twice?

Ans ☒ 1. $\frac{1135 \times 3^8}{8^{10}}$

☒ 2. $\frac{1165 \times 3^8}{8^{10}}$

☒ 3. $\frac{1175 \times 3^8}{8^{10}}$

☒ 4. $\frac{1125 \times 3^8}{8^{10}}$

Question ID : 264330121651

Status : Not Attempted and
Marked For Review

Chosen Option : --

Q.4 The angle of elevation of the top of a tower from the top of a building whose height is 680 m is 45° and the angle of elevation of the top of same tower from the foot of the same building is 60° . What is the height (in m) of the tower?

Ans ☒ 1. $340(3 + \sqrt{3})$

☐ 2. $310(3 - \sqrt{3})$

☐ 3. $310(3 + \sqrt{3})$

☐ 4. $340(3 - \sqrt{3})$

Question ID : 264330121759

Status : Answered

Chosen Option : 3

Q.5 The median of a set of 11 distinct observations is 73.2. If each of the largest five observations of the set is increased by 3, then the median of the new set:

Ans ☐ 1. is 3 times that of the original set

☐ 2. is increased by 3

☒ 3. remains the same as that of the original set

☐ 4. is decreased by 3

Question ID : 264330121733

Status : Answered

Chosen Option : 3

Q.6 In a trapezium ABCD, AB and DC are parallel to each other with a perpendicular distance of 8 m between them. Also, $(AD) = (BC) = 10$ m, and $(AB) = 15$ m $<$ (DC). What is the perimeter (in m) of the trapezium ABCD?

Ans ☐ 1. 50

☐ 2. 66

☒ 3. 62

☐ 4. 58

Question ID : 264330122874

Status : Answered

Chosen Option : 3

Q.7 A prism and a pyramid have the same base and the same height. Find the ratio of the volumes of the prism and the pyramid.

Ans ☐ 1. 2:3

☒ 2. 3:1

☐ 3. 1:3

☐ 4. 3:2

Question ID : 264330121752

Status : Not Attempted and
Marked For Review

Chosen Option : --

Q.8 If $x = \sqrt{64} + \sqrt{121} - \sqrt{169}$, then find the value of x^2 .

- Ans
- ☐ 1. 16
 - ☐ 2. 25
 - ☒ 3. 36
 - ☐ 4. 49

Question ID : 264330122832
Status : Answered
Chosen Option : 3

Q.9 If two LED TVs and one mobile phone cost ₹31,000, while two mobile phones and one LED TV cost ₹35,000, then the value of one mobile phone is:

- Ans
- ☐ 1. ₹13,500
 - ☐ 2. ₹12,500
 - ☒ 3. ₹13,000
 - ☐ 4. ₹12,000

Question ID : 26433063394
Status : Answered
Chosen Option : 3

Q.10 What is the volume of a cylinder if the radius of the cylinder is 10 cm and height is 20 cm? (Take $\pi = 3.14$)

- Ans
- ☒ 1. 6280 cm^3
 - ☐ 2. 5306 cm^3
 - ☐ 3. 6260 cm^3
 - ☐ 4. 5280 cm^3

Question ID : 26433058253
Status : Answered
Chosen Option : 1

Q.11 P, Q and R can finish a work in 5 days, 10 days, and 15 days, respectively, working alone. P and Q work on first day, P and R work on second day and P and Q work on third day and so on till the work is completed. In how many days the work will be completed?

- Ans
- ☐ 1. $\frac{13}{2}$
 - ☐ 2. $\frac{9}{2}$
 - ☒ 3. $\frac{7}{2}$
 - ☐ 4. $\frac{5}{2}$

Question ID : 264330121728
Status : Answered
Chosen Option : 3

Q.12 A goods train 350 m long passes through a tunnel of length 1250 m in 80 seconds.
What is the speed of the train?

- Ans
- ☒ 1. 64 km/h
 - ☒ 2. 56 km/h
 - ☒ 3. 78 km/h
 - ☒ 4. 72 km/h

Question ID : 264330126389
Status : Answered
Chosen Option : 4

Q.13 If one of the interior angles of a regular polygon is $\frac{15}{16}$ times of one of the interior angles of a regular decagon, then find the number of diagonals of the polygon.

- Ans
- ☒ 1. 20
 - ☒ 2. 14
 - ☒ 3. 2
 - ☒ 4. 35

Question ID : 264330121756
Status : Answered
Chosen Option : 2

Q.14 If the four-digit number 463y is divisible by 7, then what is the value of y?

- Ans
- ☒ 1. 4
 - ☒ 2. 6
 - ☒ 3. 3
 - ☒ 4. 5

Question ID : 264330122833
Status : Answered
Chosen Option : 1

Q.15 If $a \cot \theta + b \operatorname{cosec} \theta = p$ and $b \cot \theta + a \operatorname{cosec} \theta = q$ then $p^2 - q^2$ is equal to ____.

- Ans
- ☒ 1. $b^2 - a^2$
 - ☒ 2. $a^2 - b^2$
 - ☒ 3. $b - a$
 - ☒ 4. $a^2 + b^2$

Question ID : 264330126422
Status : Answered
Chosen Option : 1

Q.16 PQRS is a cyclic quadrilateral. If $\angle P$ is three times of $\angle R$ and $\angle S$ is four times of $\angle Q$, then the sum of $\angle S + \angle R$ will be:

- Ans
- ☐ 1. 169°
 - ☐ 2. 171°
 - ☐ 3. 187°
 - ☒ 4. 189°

Question ID : 264330121660

Status : Answered

Chosen Option : 4

Q.17 Working for 10 hours per day, 6 men can build a wall in a certain number of days. By working for how many hours/minutes per day can 12 men build the wall in the same days?

- Ans
- ☐ 1. 7 hours 30 minutes
 - ☒ 2. 5 hours
 - ☐ 3. 20 hours
 - ☐ 4. 10 hours

Question ID : 26433061599

Status : Answered

Chosen Option : 2

Q.18 If $2^x + 3^y = 17$ and $2^{x+2} - 3^{y+1} = 5$, then :

- Ans
- ☐ 1. $x = 1, y = 3$
 - ☐ 2. $x = 3, y = 3$
 - ☒ 3. $x = 3, y = 2$
 - ☐ 4. $x = 1, y = 2$

Question ID : 264330121656

Status : Answered

Chosen Option : 4

Q.19 What is the mode of the given data?
5, 7, 9, 7, 3, 7, 5, 7, 8, 6, 7

- Ans
- ☒ 1. 7
 - ☐ 2. 6
 - ☐ 3. 5
 - ☐ 4. 3

Question ID : 264330122996

Status : Answered

Chosen Option : 1

Q.20 Which of the following numbers is divisible by 11?

- Ans ☒ 1. 5214341
☐ 2. 5648741
☐ 3. 6598321
☐ 4. 2378965

Question ID : 264330121707
Status : Answered
Chosen Option : 1

Q.21 It is given that $\triangle ABC \cong \triangle PQR$, $AB = 5$ cm, $\angle B = 40^\circ$, and $\angle A = 80^\circ$. Which of the following options is true?

- Ans ☒ 1. $PQ = 5$ cm and $\angle R = 60^\circ$
☐ 2. $QR = 5$ cm and $\angle R = 60^\circ$
☐ 3. $QR = 5$ cm and $\angle Q = 60^\circ$
☐ 4. $PQ = 5$ cm and $\angle P = 60^\circ$

Question ID : 264330126434
Status : Answered
Chosen Option : 1

Q.22 How many kilogram of rice costing Rs.60 per kg must be mixed with 24 kg of rice costing Rs.42 per kg so that there may be a gain of 12% by selling the mixture at Rs.56 per kg?

- Ans ☐ 1. 22 kg
☐ 2. 20 kg
☒ 3. 19.2 kg
☐ 4. 21.2 kg

Question ID : 26433056302
Status : Answered
Chosen Option : 3

Q.23 At a clearance sale, a shopkeeper gives 45% discount. If a customer paid ₹330 during the sale, then what is the marked price of that shirt ?

- Ans ☐ 1. ₹550
☒ 2. ₹600
☐ 3. ₹500
☐ 4. ₹650

Question ID : 26433058790
Status : Answered
Chosen Option : 2

Q.24 If 20% of $(A + B) = 30\%$ of $(A - B)$, then what percentage of B is equal to A?

- Ans
- ☐ 1. 400%
 - ☐ 2. 300%
 - ☒ 3. 500%
 - ☐ 4. 100%

Question ID : 26433058905

Status : Answered

Chosen Option : 3

Q.25 Find the coordinates of the points where the graph $57x - 19y = 399$ cuts the coordinate axes.

- Ans
- ☐ 1. x-axis at $(-7, 0)$ and y-axis at $(0, -21)$
 - ☐ 2. x-axis at $(-7, 0)$ and y-axis at $(0, 21)$
 - ☒ 3. x-axis at $(7, 0)$ and y-axis at $(0, -21)$
 - ☐ 4. x-axis at $(7, 0)$ and y-axis at $(0, 21)$

Question ID : 264330121743

Status : Answered

Chosen Option : 3

Q.26 Rajnish borrowed ₹1,500 from a bank and repaid the entire amount with interest in two equal annual instalments, the first instalment being paid a year after Rajnish borrowed from the bank. If the rate of interest was 40% per annum, compounded annually, then what was the value (in ₹) of each instalment paid by Rajnish?

- Ans
- ☐ 1. 1125
 - ☐ 2. 1470
 - ☒ 3. 1225
 - ☐ 4. 1350

Question ID : 264330122844

Status : Not Answered

Chosen Option : --

Q.27 A sum triple itself in 9 years at simple interest. Find the rate of interest per annum is.

- Ans
- ☐ 1. $38\frac{2}{9}\%$
 - ☐ 2. $33\frac{1}{3}\%$
 - ☐ 3. $27\frac{1}{9}\%$
 - ☒ 4. $22\frac{2}{9}\%$

Question ID : 264330126378

Status : Answered

Chosen Option : 4

Q.28 A starts a business with ₹75,000 and B joins the business 5 months later with an investment of ₹80,000. After 1 year, they earn a profit of ₹4,08,800. Find the share of A and B (in ₹).

- Ans** ☒ 1. 2,52,000 and 1,56,800
☒ 2. 2,50,000 and 1,58,800
☒ 3. 2,48,000 and 1,60,800
☒ 4. 2,49,500 and 1,59,300

Question ID : 264330121714
 Status : Answered
 Chosen Option : 1

Q.29 $(\sin \theta + \operatorname{cosec} \theta)^2 + (\cos \theta + \sec \theta)^2 = ?$

- Ans** ☒ 1. $5 + \tan^2 \theta + \cot^2 \theta$
☒ 2. $7 + \tan^2 \theta - \cot^2 \theta$
☒ 3. $7 + \tan^2 \theta + \cot^2 \theta$
☒ 4. $5 + \tan^2 \theta - \cot^2 \theta$

Question ID : 264330126430
 Status : Not Attempted and Marked For Review
 Chosen Option : --

Q.30 The value of $\frac{0.7 \times 0.7 \times 0.7 + 0.3 \times 0.3 \times 0.3}{0.7 \times 0.7 - 0.7 \times 0.3 + 0.3 \times 0.3}$ is _____.

- Ans** ☒ 1. 2
☒ 2. 1
☒ 3. 3
☒ 4. -1

Question ID : 26433066408
 Status : Answered
 Chosen Option : 2

Section : Reasoning and General Intelligence

Q.1 Information given below represents the number codes for the given letters. Select the combination of numbers so that the letters arranged accordingly will form a meaningful word.

R = 1, E = 2, A = 3, C = 4, T = 5, I = 6, V = 7, E = 8

- Ans** ☒ 1. 4,1,2,3,5,8,7,6
☒ 2. 4,1,2,3,5,6,7,8
☒ 3. 7,2,1,3,8,4,5,6
☒ 4. 4,3,1,5,6,7,8,2

Question ID : 264330121087
 Status : Answered
 Chosen Option : 2

Q.2 In a code language, 'SLAIN' is written as 'PKCNU' and 'DENT' is written as 'VPGF'. How will 'CUBOID' be written in that language?

Ans ☒ 1. FKQDWE

☐ 2. FJQDWE

☐ 3. FKQDVF

☐ 4. EWDPKE

Question ID : 26433068947

Status : Answered

Chosen Option : 1

Q.3 Three of the following four triads are alike in a certain way as they are formed by performing same mathematical operations among themselves and thus form a group. Which triad does NOT belong to that group?

Ans ☐ 1. 11 : 21 : 121

☒ 2. 7 : 15 : 49

☐ 3. 2 : 3 : 4


☐ 4. 9 : 17 : 81

Question ID : 264330126248

Status : Answered

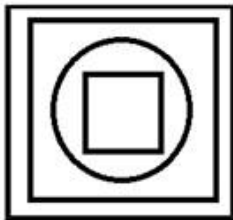
Chosen Option : 2

Q.4 Out of the following five figures, four are alike in some manner and one differs from these in that manner. Select the odd figure.




Ans

✗ 1.



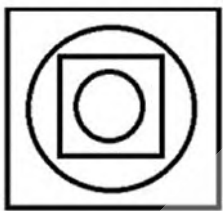
✗ 2.



✓ 3.



✗ 4.



Question ID : 264330128894

Status : Answered

Chosen Option : 4

Q.5 Select the correct combination of mathematical signs to sequentially replace the * signs and balance the given equation.
 $11 * 7 * 345 * 5 * 31 = 115$

Ans ✗ 1. + × ÷ -

✓ 2. × + ÷ -

✗ 3. ÷ × + -

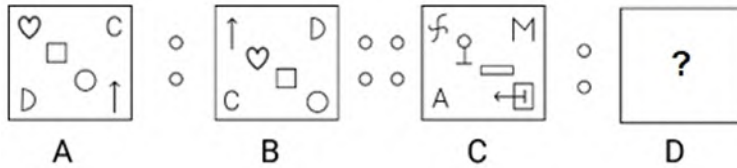
✗ 4. ÷ - + ×

Question ID : 26433068109

Status : Answered

Chosen Option : 2

Q.6 Figure A is related to B following a certain pattern. Following the same pattern, figure C is related to D. Study the pattern and select the figure which should be placed in place of D.



Ans

- ✗ 1.
- ✓ 2.
- ✗ 3.
- ✗ 4.

Question ID : 264330121403

Status : Answered

Chosen Option : 2

Q.7 Seven persons are sitting around a circular dining table facing the towards the centre. S is sitting to the immediate left of Y and third to the right of R. R is sitting to the immediate left of A and immediate right of P. A is sitting to the immediate left of D. Q is sitting to the immediate left of P. If D exchanges seat with Y and P with Q, then who is sitting to the immediate right of D?

- ✓ 1. P
- ✗ 2. S
- ✗ 3. Q
- ✗ 4. R

Question ID : 26433081995

Status : Not Attempted and Marked For Review

Chosen Option : --

Q.8 In this question, two statements I and II have been given. These statements may be independent causes or effects of independent causes or a common cause. One of the statements may be the effect of the other statement. Read both statements and select the correct answer.

I. Over the last two years 22% of the Company P's manpower was laid off.

II. Over the past two years Company P has sold off many of their major assets.

Ans ✓ 1. Both I and II are effects of a common cause.

✗ 2. I is the cause and II is its possible effect.

✗ 3. II is the cause and I is its possible effect.


✗ 4. Both I and II are independent causes.

Question ID : 264330123146

Status : Answered


Chosen Option : 2

Q.9 Out of the following five figures, four are alike in some manner and one differs from these in that manner. Select the odd figure.



Ans


✗ 1.



✗ 2.



✓ 3.



✗ 4.



Question ID : 264330128893

Status : Answered

Chosen Option : 3

Q.10 Which of the following letter-clusters should replace # and % so that the pattern and relationship followed between the letter-cluster pair on the left side of :: is the same as that on the right side of ::?

: KNE :: PQV : %

Ans ☒ 1. # = NOB, % = SRY

☒ 2. # = NKF, % = MTU

☒ 3. # = MOB, % = RTT

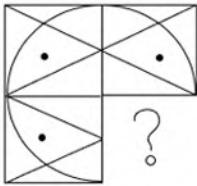
☒ 4. # = HQD, % = MTV

Question ID : 264330121404

Status : Not Attempted and
Marked For Review

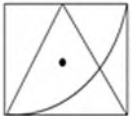
Chosen Option : --

Q.11 Select the figure from the options that can replace the question mark (?) and complete the given pattern.

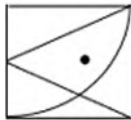


Ans

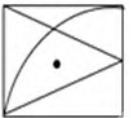
☒ 1.



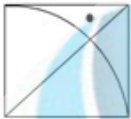
☒ 2.



☒ 3.



☒ 4.



Question ID : 26433083132

Status : Answered

Chosen Option : 2

Q.12 Given below is a question followed by two statements I and II. Read both statements carefully to decide which one of them is sufficient to answer the question

Six people - K, M, N, P, Q and R are sitting around a circular table facing the centre.

Who sits second to the left of P?

(I) K sits to the immediate right of P. Only two people sit between P and Q. R sits second to the right of M.

(II) Only two people sit between N and M. Q is an immediate neighbour of M. Only one person sits between Q and K.

Ans ☒ 1. Data in statement II alone is sufficient to answer the question while data in statement I is not.

☒ 2. Data in statement I alone is sufficient to answer the question while data in statement II is not.

☒ 3. Data in statements I and II together are NOT sufficient to answer the question.

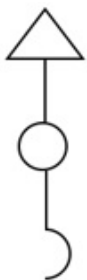
☒ 4. Data in statements I and II together are sufficient to answer the question.

Question ID : 264330121434

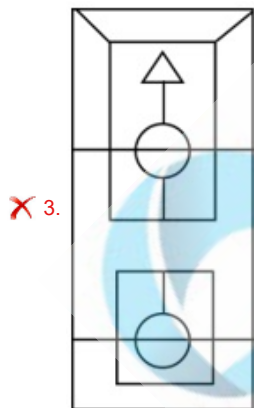
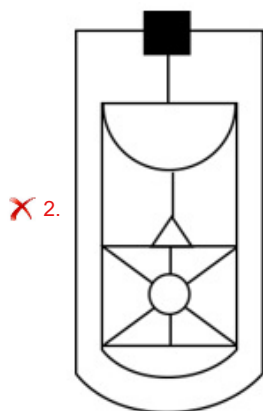
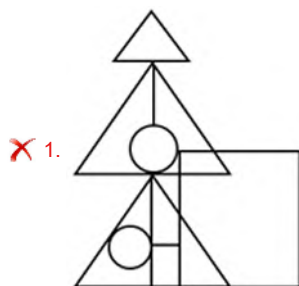
Status : Not Attempted and
Marked For Review

Chosen Option : --

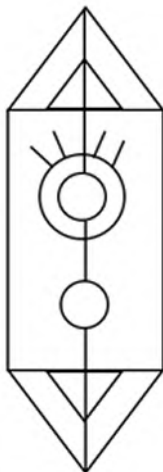
Q.13 Select the option in which the following figure is embedded. (Rotation is NOT allowed)



Ans



✓ 4.



Question ID : 264330121395

Status : Answered

Chosen Option : 4

Q.14 Three statements are given, followed by three conclusions numbered I, II and III. Assuming the statements to be true, even if they seem to be at variance with commonly known facts, decide which of the conclusions logically follow(s) from the statements.

Statement:

Some Bangles are Bracelets.

All chains are Rings.

Some Bracelets are Chains.

Conclusions:

(I) Some Bangles are Rings.

(II) Some Chains are Bangles.

(III) Some Rings are Bracelets.

Ans ✓ 1. Only Conclusion III follows.

✗ 2. Both Conclusions I and II follow.

✗ 3. Both Conclusions I and III follow.

✗ 4. Only Conclusion I follows.

Question ID : 26433068963

Status : Answered

Chosen Option : 3

Q.15 Amit ranked 7th from the top and 26th from the bottom in his class. How many students are there in the class?

Ans ✗ 1. 31

✗ 2. 33

✗ 3. 27

✓ 4. 32

Question ID : 264330121141

Status : Answered

Chosen Option : 4

Q.16 Select the number from among the given options that can replace the question mark (?) in the following series.
242, 288, ?, 392, 450

Ans ✓ 1. 338

✗ 2. 375

✗ 3. 316

✗ 4. 324

Question ID : 26433074537

Status : Answered

Chosen Option : 1

Q.17 निर्देश: एक कथन के बाद दो अनुमान I और II दिए गए हैं। यह मानते हुए कि दिया गया कथन सत्य है, भले ही यह सामान्य रूप से ज्ञात तथ्यों से भिन्न प्रतीत होता हो, तय करें कि दिए गए अनुमानों में से कौन सा /से अनुमान कथन का तार्किक रूप से अनुसरण करता है/करते हैं।

कथन:

टीम-X और टीम-Y के बीच एक फुटबॉल मैच में, टीम-Y द्वारा किए गए गोलों की कुल संख्या 5 थी, जिनमें से 3 गोल बाएँ पैर वाले खिलाड़ी द्वारा किए गए थे।

अनुमान:

I. बाएँ पैर वाला खिलाड़ी गोल करने में माहिर था।

II. टीम-Y के 60% खिलाड़ी बाएँ पैर वाले हैं।

Ans

✗ 1. I और II, दोनों अनुसरण करते हैं

✗ 2. केवल II अनुसरण करता है

✓ 3. न तो I और न ही II अनुसरण करता है

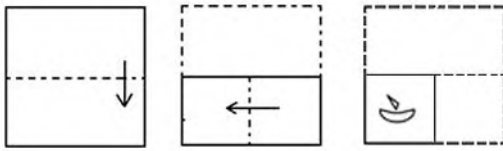
✗ 4. केवल I अनुसरण करता है

Question ID : 264330128899

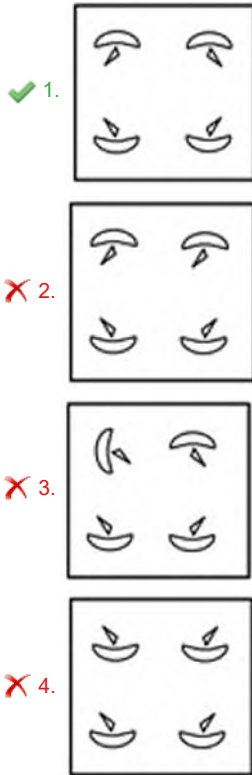
Status : Answered

Chosen Option : 4

Q.18 The sequence of folding a piece of paper and the manner in which the folded paper has been cut is shown below. Choose a figure which would most closely resemble the unfolded form of the paper.



Ans



Question ID : 264330126302

Status : Answered

Chosen Option : 1

Q.19 Select the option that represents the letters that, when placed from left to right in the following blanks, will complete the letter-series.

S C R _ W S _ R _ W _ C _ G W S _ R H _

- Ans** ✗ 1. G D F S R C W
- ✗ 2. H D F S R C W
- ✓ 3. E C F S R C W
- ✗ 4. E D F S R D W

Question ID : 264330126280

Status : Answered

Chosen Option : 2

Q.20 If + means \times , \times means \div , and \div means +, what will be the value of the following expression?
 $3 \div 6 + 3 - 4 \times 4 = ?$

- Ans**
- ☒ 1. 8
 - ☒ 2. 5
 - ☒ 3. 6
 - ☒ 4. 4

Question ID : 26433068610

Status : Answered

Chosen Option : 3

Q.21 In this question, a statement is followed by two courses of actions, numbered I and II. You must assume everything in the statement to be true and on the basis of the information given in the statement, decide which of the course of action/s logically follow for pursuing.

Statement: Some serious mistakes were found in the technical section of a company.

Course of Action:

I. An efficient technical team should be appointed to check the technical errors.

II. A reason explanation notice should be issued to all the employees involved in the irregularities.

- Ans**
- ☒ 1. Neither I nor II follows
 - ☒ 2. Only I follows
 - ☒ 3. Only II follows
 - ☒ 4. Both I and II follow

Question ID : 264330123206

Status : Answered

Chosen Option : 4

Q.22 Select the figure from among the given options that can replace the question mark (?) in the following series.

+	⊕	A	∞	B	A	≠	
	\$	⊕	≠	C		∞	
∞	≠	∞	≠	\$	\$	A	B
							?

Ans

✓ 1.

∞		D
A	B	C

✗ 2.

	D	C
		B
	∞	A

✗ 3.

A	B	C
∞		D

✗ 4.

E	C	B
		A
		∞

Question ID : 264330101257

Status : Answered

Chosen Option : 3

Q.23 In a certain code language, 'POLISH' is written as '89' and 'CLIP' is written as '72'. How will 'CONTROL' be written in that language?

Ans

✗ 1. 89

✗ 2. 92

✗ 3. 106

✓ 4. 99

Question ID : 264330126265

Status : Answered

Chosen Option : 4

Q.24 Three of the following words are alike in some manner and hence form a group. Which word does NOT belong to that group? (The words must be considered as meaningful English words and must not be grouped based on the number of letters/number of consonants/vowels in the word)

- Ans
- ☒ 1. Engineer
 - ☒ 2. Doctor
 - ☒ 3. Carpenter
 - ☒ 4. Teacher

Question ID : 26433065632
Status : Answered
Chosen Option : 3

Q.25 Select the set in which the numbers are related in the same way as are the numbers of the following sets.

(NOTE : Operations should be performed on the whole numbers, without breaking down the numbers into its constituent digits. E.g. 13 – Operations on 13 such as adding /deleting /multiplying etc. to 13 can be performed. Breaking down 13 into 1 and 3 and then performing mathematical operations on 1 and 3 is NOT allowed)
(18, 39, 60), (27, 48, 69)

- Ans
- ☒ 1. (24, 64, 96)
 - ☒ 2. (35, 56, 77)
 - ☒ 3. (31, 52, 84)
 - ☒ 4. (17, 28, 49)

Question ID : 264330126246
Status : Answered
Chosen Option : 2

Q.26 'A # B' means 'A is the brother of B'.
'A @ B' means 'A is the daughter of B'.
'A & B' means 'A is the husband of B'.
'A % B' means 'A is the wife of B'.
If Z % X # C @ V & B @ N, then how is Z related to B?

- Ans
- ☒ 1. Son's wife
 - ☒ 2. Daughter
 - ☒ 3. Husband's mother
 - ☒ 4. Mother

Question ID : 264330126291
Status : Answered
Chosen Option : 1

Q.27 'A # B' means 'A is the brother of B'.
'A @ B' means 'A is the daughter of B'.
'A & B' means 'A is the husband of B'.
'A % B' means 'A is the wife of B'.
If D @ N @ H & Y @ F % V, then how is Y related to D?

- Ans
- ☒ 1. Mother's mother
 - ☒ 2. Sister's daughter
 - ☒ 3. Mother
 - ☒ 4. Daughter's daughter

Question ID : 264330126286
Status : Answered
Chosen Option : 3

Q.28 In the given question, the statement is followed by two conclusions. Which of the two conclusions is/are true?

Statement: $Z = E \geq R > G < Y > Q = F$

Conclusions:

I. $R < F$

II. $R \geq Z$

- Ans
- ☒ 1. Both conclusions I and II are true
 - ☒ 2. Only conclusion II is true
 - ☒ 3. Only conclusion I is true
 - ☒ 4. Neither conclusion I nor II is true

Question ID : 26433057324

Status : Answered

Chosen Option : 4

Q.29 A question is given, followed by two statements numbered (I) and (II). You have to decide whether the data provided in the statements is sufficient to answer the question. Read both the statements and select the appropriate answer.

Question: Four people, A, B, C and D, are sitting in a straight line, facing south. Who is sitting at the right end?

Statements:

(I) Only two people sit between B and D; A sits to the immediate left of B.

(II) Only one person sits between B and C; A sits to the immediate right of C.

- Ans
- ☒ 1. Data in statement I alone is sufficient to answer the question while data in statement II is not
 - ☒ 2. Data in statement II alone is sufficient to answer the question while data in statement I is not
 - ☒ 3. Data in either statement I alone or statement II alone is sufficient to answer the question
 - ☒ 4. Data in statements I and II together is sufficient to answer the question

Question ID : 264330121194

Status : Answered

Chosen Option : 1

Q.30 Select the correct mirror image of the given combination when the mirror is held at the right side of the image.

E d T 5 8 9 ghi



- Ans
- ☒ 1. idg @ 8 2 T b E
 - ☒ 2. E b T 5 8 9 ghi
 - ☒ 3. idg @ 8 2 T b E
 - ☒ 4. idg @ 8 2 T d E

Question ID : 264330102480

Status : Answered

Chosen Option : 1

Q.1 Select the correct homonym from the given options to fill in the blank.
The athlete's _____ was badly injured due to a fall on the track.

- Ans ☒ 1. toad
☒ 2. toe
☒ 3. tow
☒ 4. to

Question ID : 264330120787
Status : Answered
Chosen Option : 2

Q.2 Select the option that expresses the given sentence in direct speech.
Harry said that he would not be in town on Friday.

- Ans ☒ 1. Harry saying, "I will not be in town on Friday".
☒ 2. Harry said, "I will not be in town on Friday".
☒ 3. Harry said, "I can't be in town on Friday".
☒ 4. Harry said, "I must not be in town on Friday".

Question ID : 26433070765
Status : Answered
Chosen Option : 2

Q.3 Select the option that expresses the given sentence in active voice.

The story of his uncle's mysterious disappearance was first heard by Rajat in his childhood

- Ans ☒ 1. The story uncle heard first time was about Rajat's mysterious disappearance in his childhood.
☒ 2. Rajat first heard the story of his uncle's mysterious disappearance in his childhood.
☒ 3. The story Rajat first heard in his childhood was about his uncle's mysterious disappearance.
☒ 4. Rajat's first story that uncle heard in his childhood was about his mysterious disappearance.

Question ID : 26433055599
Status : Answered
Chosen Option : 2

Q.4 Select the most appropriate ANTONYM of the underlined word.

The audience sneered at the monologue uttered by the veteran actor.

- Ans ☒ 1. Waved
☒ 2. Lauded
☒ 3. Unleashed
☒ 4. Ascribed

Question ID : 26433070531
Status : Answered
Chosen Option : 2

Q.5 Select the most appropriate option to fill in the blank.

Nowadays, online shopping is easier _____ shopping in a market.

- Ans ☒ 1. like
☒ 2. than
☒ 3. then
☒ 4. as

Question ID : 26433061501

Status : Answered

Chosen Option : 2

Q.6 Sentences of a paragraph are given below in jumbled order. Arrange the sentences in the correct order to form a meaningful and coherent paragraph.

- A) The Sustainable Development Goals (SDGs) were adopted by all United Nations Member States in 2015 to end poverty, reduce inequality and build more peaceful, prosperous societies by 2030.
B) The SDGs cannot be achieved without the realisation of child rights.
C) Also known as the Global Goals, the SDGs are a call to action to create a world where no one is left behind.
D) As world leaders work to deliver on the 2030 promise, children around the globe are standing up to secure their right to good health, quality education, a clean planet and more.

- Ans ☒ 1. ABDC
☒ 2. ADCB
☒ 3. ACBD
☒ 4. ADBC

Question ID : 264330122779

Status : Answered

Chosen Option : 3

Q.7 Sentences of a paragraph are given below in jumbled order. Arrange the sentences in the correct order to form a meaningful and coherent paragraph.

- P. The prices of cooking gas, pulses and vegetables have registered a sharp rise.
Q. In recent years the prices of essential commodities have gone up sharply.
R. The low-income groups and the salaried classes are the worst sufferers.
S. Living has become quite a costly affair these days.

- Ans ☒ 1. RPSQ
☒ 2. QSRP
☒ 3. SRQP
☒ 4. PQRS

Question ID : 264330121860

Status : Answered

Chosen Option : 3

Q.8 Select the most appropriate meaning of the highlighted idiom.
The employee took the manager's remark with a pinch of salt

- Ans ☒ 1. Going for the truth
☒ 2. Distasteful and boring
☒ 3. Doubt the truth or value of something
☒ 4. Ever ready to condemn someone

Question ID : 264330120743
Status : Answered
Chosen Option : 3

Q.9 Identify the INCORRECTLY spelt word in the given sentence.
If she had begun earlier, she might have succeeded in finishing the extremely intricate project before the deadline.

- Ans ☒ 1. deadline
☒ 2. intricate
☒ 3. succeeded
☒ 4. earlier

Question ID : 26433059972
Status : Answered
Chosen Option : 3

Q.10 The following sentence has been split into four segments. Identify the segment that contains a grammatical error.

Everybody stared / when me / entered the / drawing room.

- Ans ☒ 1. when me
☒ 2. Everybody stared
☒ 3. drawing room
☒ 4. entered the

Question ID : 26433061482
Status : Answered
Chosen Option : 1

Q.11 Sentences of a paragraph are given below in jumbled order. Arrange the sentences in the correct order to form a meaningful and coherent paragraph.

- A. I was almost drowned a dozen times; was nearly boiled alive and just missed being cremated.
B. Now, my well-being is simply the result of a careful and measured mode of living and perhaps the most astonishing thing is that three times in my youth I was rendered by illness a hopeless physical wreck and given up by physicians.
C. More than this, through ignorance, and light-heartedness, I got into all sorts of difficulties, dangers and scrapes from which I extricated myself as by enchantment.
D. But as I recall these incidents to my mind I feel convinced that my preservation was not altogether accidental.

- Ans ☒ 1. CADB
☒ 2. BADC
☒ 3. BCAD
☒ 4. DCAB

Question ID : 264330123966
Status : Answered
Chosen Option : 3

Q.12 Select the most appropriate option that can substitute the underlined segment in the given sentence. If there is no need to substitute it, select 'No substitution required'.

Bloomberg Businessweek is not more popular than some other business magazines in the US.

- Ans** ☒ 1. No substitution required
☐ 2. the most popular than
☐ 3. as more popular than
☐ 4. so popular than

Question ID : 26433058619
Status : Answered
Chosen Option : 1

Q.13 Select the option that can be used as a one-word substitute for the given group of words.

The one who loves mankind

- Ans** ☐ 1. Pessimist
☐ 2. Misogynist
☐ 3. Optimist
☒ 4. Philanthropist

Question ID : 26433060818
Status : Answered
Chosen Option : 4

Q.14 Select the most appropriate meaning of the underlined word in a sentence.

Even though James won the election, he has not brought any of his campaign promises to fruition.

- Ans** ☐ 1. concealment
☐ 2. nourishment
☐ 3. disappointment
☒ 4. accomplishment

Question ID : 26433055999
Status : Answered
Chosen Option : 4

Q.15 Select the most appropriate option to fill in the blank.

The committee will _____ a survey on the government schemes.

- Ans** ☒ 1. conduct
☐ 2. fight
☐ 3. hold
☐ 4. originate

Question ID : 26433058500
Status : Answered
Chosen Option : 1

Q.16 Select the option that can be used as a one-word substitute for the given group of words.

An arched structure in a garden having climbing plants

- Ans ☒ 1. Shelter
☒ 2. Pergola
☒ 3. Path
☒ 4. Shed

Question ID : 26433070721
Status : Answered
Chosen Option : 2

Q.17 Select the most appropriate option to fill in the blank.
The security guard needs a _____ of shoes.

- Ans ☒ 1. pare
☒ 2. pear
☒ 3. payor
☒ 4. pair

Question ID : 26433058531
Status : Answered
Chosen Option : 4

Q.18 Select the option that expresses the given sentence in active voice.
A new invention has been made by him.

- Ans ☒ 1. He was making a new invention.
☒ 2. He has made a new invention.
☒ 3. He had been making a new invention.
☒ 4. He were making a new invention.

Question ID : 264330123912
Status : Answered
Chosen Option : 2

Q.19 Select the most appropriate ANTONYM of the underlined word.

Aunt May thought that Uncle Ken's job as a manager at Firpo's hotel in Shimla was a stable one.

- Ans ☒ 1. Lucrative
☒ 2. Permanent
☒ 3. Durable
☒ 4. Mutable

Question ID : 26433070536
Status : Answered
Chosen Option : 4

Q.20 Sentences of a paragraph are given in jumbled order. Arrange the sentences in the correct order to form a meaningful and coherent paragraph.

- A. Instead, they are constrictors, meaning they squeeze their prey to death before swallowing it whole.
- B. Agile on water but awkward on land, the green anaconda is one of the largest snakes in the world.
- C. Most people assume that anacondas are very poisonous, but they are actually non-venomous.
- D. At 29 feet long and 550 pounds, these snakes are huge!

Ans ☒ 1. BACD

☒ 2. BDCA

☒ 3. BCAD

☒ 4. DABC

Question ID : 26433070665

Status : Answered

Chosen Option : 2

Q.21 The following sentence has been split into four segments. Identify the segment that contains a grammatical error.

Daniel sat on / his new bike / and went afar / a ride.

Ans ☒ 1. a ride

☒ 2. his new bike

☒ 3. and went afar

☒ 4. Daniel sat on

Question ID : 26433061470

Status : Answered

Chosen Option : 3

Q.22 Select the most appropriate option to fill in the blank.
When the victim narrated his version of the incident, the jury was _____ .

Ans ☒ 1. honestly satisfied

☒ 2. perfectly satisfied

☒ 3. completely satisfied

☒ 4. excruciatingly satisfied

Question ID : 264330121886

Status : Answered

Chosen Option : 3

Q.23 Select the option that expresses the given sentence in indirect speech.
She said impatiently, "I don't need any help."

Ans ☒ 1. She said impatiently that I don't need any help.

☒ 2. She said impatiently that she didn't need any help.

☒ 3. She said impatiently she don't need any help.

☒ 4. She said impatiently that she doesn't need any help.

Question ID : 26433059181

Status : Answered

Chosen Option : 2

Q.24 Select the option that expresses the given sentence in direct speech.

The mother said that the kids were playing.

- Ans ☒ 1. The mother said, "The kids have been playing".
☒ 2. The mother has said, "The kids were playing".
☒ 3. The mother told, "The kids had been playing".
☒ 4. The mother said, "The kids are playing".

Question ID : 26433063615

Status : Answered

Chosen Option : 4

Q.25 Sentences of a paragraph are given below. While the first and the last sentences (S1 and S6) are in the correct order, the sentences in between are jumbled up. Arrange the sentences in the correct order to form a meaningful and coherent paragraph.

S1. In Dr. Babasaheb Ambedkar

A. but also an elder statesman and national leader

B. we have not only a crusader against the caste system,

C. a valiant fighter for the cause of the downtrodden in India

D. whose contribution in the form of the Constitution of India

S6. will be cherished forever by posterity.

- Ans ☒ 1. DABC
☒ 2. CABD
☒ 3. BACD
☒ 4. ABCD

Question ID : 26433063576

Status : Answered

Chosen Option : 3

Q.26 Select the most appropriate meaning of the given idiom.

Water under the bridge

- Ans ☒ 1. Past events that are not important anymore
☒ 2. Difficult situations in one's life
☒ 3. Promises that are made to someone and never fulfilled
☒ 4. A seasoned crop with a heavy demand

Question ID : 26433089764

Status : Answered

Chosen Option : 1

Q.27 Select the option that expresses the given sentence in passive voice.
The courier boy did not deliver the parcel.

- Ans ☒ 1. The parcel did not deliver by the courier boy.
☒ 2. The parcel had not been delivered by the courier boy.
☒ 3. The parcel had not delivered by the courier boy.
☒ 4. The parcel was not delivered by the courier boy.

Question ID : 26433058494

Status : Answered

Chosen Option : 4

Q.28 Sentences of a paragraph are given below in jumbled order. Arrange the sentences in the correct order to form a meaningful and coherent paragraph.

A. No country has yet achieved the combination of very high human development with a light ecological footprint and the impacts of climate change and biodiversity loss are growing.

B. Compounded by a climate emergency, political polarization and challenged multilateralism, continued conflicts, and forced displacement, the number of people living in poverty rose in 2020 for the first time since 1998 by an estimated 119-124 million and inequalities are growing, and the traditional social contract is no longer working for many.

C. The challenge of reaching Agenda 2030 was already significant, even before the COVID-19 pandemic hit.

D. Today's development challenges are dynamic, interconnected puzzles of multidimensional risk that require systemic solutions and multilateral cooperation is vital in addressing these shared challenges that cross boundaries of geography and time.

Ans ☒ 1. DBAC

☒ 2. ABDC

☒ 3. BCDA

☒ 4. CBDA

Question ID : 26433060241

Status : Answered

Chosen Option : 4

Q.29 Identify the INCORRECTLY spelt word in the given sentence.

The board reviewing the courses offered by the affiliated college found that the quality of academic programs was usually good but somewhat irregular.

Ans ☒ 1. irregular

☒ 2. academic

☒ 3. review

☒ 4. affiliated

Question ID : 26433061583

Status : Answered

Chosen Option : 4

Comprehension:

In the following passage, some words have been deleted. Read the passage carefully and select the most appropriate option to fill in each blank.

The Sun is the star at the center of (1) _____ Solar System. It is a nearly perfect ball of hot plasma. The Sun has inspired us since ancient times. It's central to mythology and religion in (2) _____ around the world. It keeps our planet warm enough for living things to grow. It gives us light so we can see. It is by far the most important (3) _____ of energy for life on Earth. It is about a hundred times as wide (4) _____ the Earth. If there were no sun, many things wouldn't occur like photosynthesis or the presence of oxygen, which would have caused no existence of life.

SubQuestion No : 30

Q.30 Select the most appropriate option to fill in blank number 1.

Ans ☒ 1. huge

☒ 2. typical

☒ 3. a

☒ 4. the

Question ID : 264330128945

Status : Answered

Chosen Option : 4

Comprehension:

In the following passage, some words have been deleted. Read the passage carefully and select the most appropriate option to fill in each blank.

The Sun is the star at the center of (1) _____ Solar System. It is a nearly perfect ball of hot plasma. The Sun has inspired us since ancient times. It's central to mythology and religion in (2) _____ around the world. It keeps our planet warm enough for living things to grow. It gives us light so we can see. It is by far the most important (3) _____ of energy for life on Earth. It is about a hundred times as wide (4) _____ the Earth. If there were no sun, many things wouldn't occur like photosynthesis or the presence of oxygen, which would have caused no existence of life.

SubQuestion No : 31

Q.31 Select the most appropriate option to fill in blank number 2.

- Ans** ☒ 1. scenes
☒ 2. processes
☒ 3. cultures
☒ 4. types

Question ID : 264330128946

Status : Answered

Chosen Option : 3

Comprehension:

In the following passage, some words have been deleted. Read the passage carefully and select the most appropriate option to fill in each blank.

The Sun is the star at the center of (1) _____ Solar System. It is a nearly perfect ball of hot plasma. The Sun has inspired us since ancient times. It's central to mythology and religion in (2) _____ around the world. It keeps our planet warm enough for living things to grow. It gives us light so we can see. It is by far the most important (3) _____ of energy for life on Earth. It is about a hundred times as wide (4) _____ the Earth. If there were no sun, many things wouldn't occur like photosynthesis or the presence of oxygen, which would have caused no existence of life.

SubQuestion No : 32

Q.32 Select the most appropriate option to fill in blank number 3.

- Ans** ☒ 1. control
☒ 2. gesture
☒ 3. source
☒ 4. symbol

Question ID : 264330128947

Status : Answered

Chosen Option : 3

Comprehension:

In the following passage, some words have been deleted. Read the passage carefully and select the most appropriate option to fill in each blank.

The Sun is the star at the center of (1) _____ Solar System. It is a nearly perfect ball of hot plasma. The Sun has inspired us since ancient times. It's central to mythology and religion in (2) _____ around the world. It keeps our planet warm enough for living things to grow. It gives us light so we can see. It is by far the most important (3) _____ of energy for life on Earth. It is about a hundred times as wide (4) _____ the Earth. If there were no sun, many things wouldn't occur like photosynthesis or the presence of oxygen, which would have caused no existence of life.

SubQuestion No : 33

Q.33 Select the most appropriate option to fill in blank number 4.

- Ans ☒ 1. like
☒ 2. as
☒ 3. than
☒ 4. about

Question ID : 264330128948

Status : Answered

Chosen Option : 2

Comprehension:

Read the following passage and answer the questions given after it.

Notwithstanding logistical challenges posed by COVID19 pandemic, India continues to expand its rice exports footprint in the African, Asian and European Union markets, thus having the largest share in global rice trade. The robust global demand also helped India's growth in rice exports.

In 2020-21, India's rice exports (Basmati and Non-Basmati) rose by a huge 87 per cent to 17.72 Million Tonne (MT) from 9.49 MT achieved in 2019-20.

In terms of value realisation, India's rice exports rose by 38 per cent to USD 8815 million in 2020-21 from USD 6397 million reported in 2019-20. In terms of Rupees, India's rice export grew by 44 per cent to Rs 65298 crore in 2020-21 from Rs 45379 crore in the previous year. In the first seven months of the current financial year (2021-22), India's rice exports rose by more than 33 per cent to 11.79 MT from 8.91 MT achieved during April-October, 2020-21. It is anticipated that India's rice exports in 2021-22 would likely surpass the record feet of 17.72 MT achieved in 2020-21.

In 2020-21, India shipped non-basmati rice to nine countries - Timor-Leste, Puerto Rico, Brazil, Papua New Guinea, Zimbabwe, Burundi, Eswatini, Myanmar and Nicaragua, where exports were carried out for the first time or earlier the shipment was smaller in volume.

India's Non-Basmati rice exports was valued at USD 4796 million (Rs 35448crore) in 2020-21, with Basmati Rice exports a close second at USD 4018 million (Rs 29,849 crore).

In terms of volume of Basmati rice exports in 2020-21, top ten countries – Saudi Arabia, Iran, Iraq, Yemen, United Arab Emirates, United States of America, Kuwait, United Kingdom, Qatar and Oman have a share of close to 80 per cent in total shipments of aromatic long grained rice from India.

Top ten countries – Nepal, Benin, Bangladesh, Senegal, Togo, Cote D Ivoire, Guinea, Malaysia, Iraq, United Arab Emirates – have a share of 57 per cent in India's total exports of non-Basmati rice in 2020-21 in terms of volume.

SubQuestion No : 34

Q.34 What is the estimate of rice export in the year 2021-22?

- Ans ☒ 1. It will remain the same as the 17.72 MT rice export achieved in 2020-21.
☒ 2. It may fall below the 17.72 MT rice export achieved in 2020-21.
☒ 3. It will exceed the 17.72 MT rice export achieved in 2020-21.
☒ 4. It will not pass beyond the 17.72 MT rice export achieved in 2020-21.

Question ID : 264330128818

Status : Answered

Chosen Option : 3

Comprehension:

Read the following passage and answer the questions given after it.

Notwithstanding logistical challenges posed by COVID19 pandemic, India continues to expand its rice exports footprint in the African, Asian and European Union markets, thus having the largest share in global rice trade. The robust global demand also helped India's growth in rice exports.

In 2020-21, India's rice exports (Basmati and Non-Basmati) rose by a huge 87 per cent to 17.72 Million Tonne (MT) from 9.49 MT achieved in 2019-20.

In terms of value realisation, India's rice exports rose by 38 per cent to USD 8815 million in 2020-21 from USD 6397 million reported in 2019-20. In terms of Rupees, India's rice export grew by 44 per cent to Rs 65298 crore in 2020-21 from Rs 45379 crore in the previous year. In the first seven months of the current financial year (2021-22), India's rice exports rose by more than 33 per cent to 11.79 MT from 8.91 MT achieved during April-October, 2020-21. It is anticipated that India's rice exports in 2021-22 would likely surpass the record feet of 17.72 MT achieved in 2020-21.

In 2020-21, India shipped non-basmati rice to nine countries - Timor-Leste, Puerto Rico, Brazil, Papua New Guinea, Zimbabwe, Burundi, Eswatini, Myanmar and Nicaragua, where exports were carried out for the first time or earlier the shipment was smaller in volume.

India's Non-Basmati rice exports was valued at USD 4796 million (Rs 35448crore) in 2020-21, with Basmati Rice exports a close second at USD 4018 million (Rs 29,849 crore).

In terms of volume of Basmati rice exports in 2020-21, top ten countries – Saudi Arabia, Iran, Iraq, Yemen, United Arab Emirates, United States of America, Kuwait, United Kingdom, Qatar and Oman have a share of close to 80 per cent in total shipments of aromatic long grained rice from India.

Top ten countries – Nepal, Benin, Bangladesh, Senegal, Togo, Cote D Ivoire, Guinea, Malaysia, Iraq, United Arab Emirates – have a share of 57 per cent in India's total exports of non-Basmati rice in 2020-21 in terms of volume.

SubQuestion No : 35

Q.35 Which of the following questions cannot be answered on the basis of the above passage?

Ans

- ✓ 1. How much Basmati rice was exported by India in 2020-21?
- ✗ 2. How much rice (Basmati and Non Basmati) was exported by India in 2020-21?
- ✗ 3. Which top 10 countries buy Non -Basmati rice from India?
- ✗ 4. What was the value of Basmati rice export from India?

Question ID : 264330128815

Status : Answered

Chosen Option : 3

Comprehension:

Read the following passage and answer the questions given after it.

Notwithstanding logistical challenges posed by COVID19 pandemic, India continues to expand its rice exports footprint in the African, Asian and European Union markets, thus having the largest share in global rice trade. The robust global demand also helped India's growth in rice exports.

In 2020-21, India's rice exports (Basmati and Non-Basmati) rose by a huge 87 per cent to 17.72 Million Tonne (MT) from 9.49 MT achieved in 2019-20.

In terms of value realisation, India's rice exports rose by 38 per cent to USD 8815 million in 2020-21 from USD 6397 million reported in 2019-20. In terms of Rupees, India's rice export grew by 44 per cent to Rs 65298 crore in 2020-21 from Rs 45379 crore in the previous year. In the first seven months of the current financial year (2021-22), India's rice exports rose by more than 33 per cent to 11.79 MT from 8.91 MT achieved during April-October, 2020-21. It is anticipated that India's rice exports in 2021-22 would likely surpass the record feet of 17.72 MT achieved in 2020-21.

In 2020-21, India shipped non-basmati rice to nine countries - Timor-Leste, Puerto Rico, Brazil, Papua New Guinea, Zimbabwe, Burundi, Eswatini, Myanmar and Nicaragua, where exports were carried out for the first time or earlier the shipment was smaller in volume.

India's Non-Basmati rice exports was valued at USD 4796 million (Rs 35448crore) in 2020-21, with Basmati Rice exports a close second at USD 4018 million (Rs 29,849 crore).

In terms of volume of Basmati rice exports in 2020-21, top ten countries – Saudi Arabia, Iran, Iraq, Yemen, United Arab Emirates, United States of America, Kuwait, United Kingdom, Qatar and Oman have a share of close to 80 per cent in total shipments of aromatic long grained rice from India.

Top ten countries – Nepal, Benin, Bangladesh, Senegal, Togo, Cote D Ivoire, Guinea, Malaysia, Iraq, United Arab Emirates – have a share of 57 per cent in India's total exports of non-Basmati rice in 2020-21 in terms of volume.

SubQuestion No : 36

Q.36 Which of the following countries imported rice from India for the first time?

Ans

☒ 1. Iraq

☒ 2. Bangladesh

☒ 3. Brazil

☒ 4. United Arab Emirates

Question ID : 264330128816

Status : Answered

Chosen Option : 3

Comprehension:

Read the following passage and answer the questions given after it.

Notwithstanding logistical challenges posed by COVID19 pandemic, India continues to expand its rice exports footprint in the African, Asian and European Union markets, thus having the largest share in global rice trade. The robust global demand also helped India's growth in rice exports.

In 2020-21, India's rice exports (Basmati and Non-Basmati) rose by a huge 87 per cent to 17.72 Million Tonne (MT) from 9.49 MT achieved in 2019-20.

In terms of value realisation, India's rice exports rose by 38 per cent to USD 8815 million in 2020-21 from USD 6397 million reported in 2019-20. In terms of Rupees, India's rice export grew by 44 per cent to Rs 65298 crore in 2020-21 from Rs 45379 crore in the previous year. In the first seven months of the current financial year (2021-22), India's rice exports rose by more than 33 per cent to 11.79 MT from 8.91 MT achieved during April-October, 2020-21. It is anticipated that India's rice exports in 2021-22 would likely surpass the record feet of 17.72 MT achieved in 2020-21.

In 2020-21, India shipped non-basmati rice to nine countries - Timor-Leste, Puerto Rico, Brazil, Papua New Guinea, Zimbabwe, Burundi, Eswatini, Myanmar and Nicaragua, where exports were carried out for the first time or earlier the shipment was smaller in volume.

India's Non-Basmati rice exports was valued at USD 4796 million (Rs 35448crore) in 2020-21, with Basmati Rice exports a close second at USD 4018 million (Rs 29,849 crore).

In terms of volume of Basmati rice exports in 2020-21, top ten countries – Saudi Arabia, Iran, Iraq, Yemen, United Arab Emirates, United States of America, Kuwait, United Kingdom, Qatar and Oman have a share of close to 80 per cent in total shipments of aromatic long grained rice from India.

Top ten countries – Nepal, Benin, Bangladesh, Senegal, Togo, Cote D Ivoire, Guinea, Malaysia, Iraq, United Arab Emirates – have a share of 57 per cent in India's total exports of non-Basmati rice in 2020-21 in terms of volume.

SubQuestion No : 37

Q.37 Which of the following countries imports Basmati rice from India?

- Ans**
- ☒ 1. Malaysia
 - ☒ 2. Nepal
 - ☒ 3. Bangladesh
 - ☒ 4. Kuwait

Question ID : 264330128817

Status : Answered

Chosen Option : 4

Comprehension:

Read the given passage and answer the questions that follow.

As the Sun inches closer to its peak activity in its solar cycle, an explosion has been picked up behind the north-eastern limb of the star in our solar system. Solar observatories saw bits and pieces of the explosion, which remain obscured in view from Earth's orbit.

The explosion was spotted on 31 July at around 2309 UT and Earth-orbiting satellites registered a long-lasting C9.3-class solar flare. "The intensity is probably an underestimate because it was partially eclipsed by the edge of the sun. Nasa's Solar Dynamics Observatory (SDO) saw hot debris flying away from the blast site," space weather, which tracks the solar activity, reported.

While the explosion was powerful, experts have predicted that Earth is not in the line of fire from the Sun. Scientists are expected to get a view of the active region later this week as it comes to sight. Earth is not in the line of fire. The explosion is significant because it may herald an active region set to emerge over the sun's north-eastern limb later this week. A new sunspot group could bring an end to weeks of relative quiet," space weather said in its report.

SubQuestion No : 38

Q.38 Select the most appropriate synonym of the given word from the passage.
Partially

- Ans ☒ 1. Supportively
☒ 2. Partly
☒ 3. Frankly
☒ 4. Completely

Question ID : 264330128912

Status : Answered

Chosen Option : 2

Comprehension:

Read the given passage and answer the questions that follow.

As the Sun inches closer to its peak activity in its solar cycle, an explosion has been picked up behind the north-eastern limb of the star in our solar system. Solar observatories saw bits and pieces of the explosion, which remain obscured in view from Earth's orbit.

The explosion was spotted on 31 July at around 2309 UT and Earth-orbiting satellites registered a long-lasting C9.3-class solar flare. "The intensity is probably an underestimate because it was partially eclipsed by the edge of the sun. Nasa's Solar Dynamics Observatory (SDO) saw hot debris flying away from the blast site," space weather, which tracks the solar activity, reported.

While the explosion was powerful, experts have predicted that Earth is not in the line of fire from the Sun. Scientists are expected to get a view of the active region later this week as it comes to sight. Earth is not in the line of fire. The explosion is significant because it may herald an active region set to emerge over the sun's north-eastern limb later this week. A new sunspot group could bring an end to weeks of relative quiet," space weather said in its report.

SubQuestion No : 39

Q.39 Select the most appropriate synonym of the given word from the passage.
Debris

- Ans ☒ 1. Detritus
☒ 2. Rays
☒ 3. Specks
☒ 4. Liquid

Question ID : 264330128913

Status : Answered

Chosen Option : 1

Comprehension:

Read the given passage and answer the questions that follow.

As the Sun inches closer to its peak activity in its solar cycle, an explosion has been picked up behind the north-eastern limb of the star in our solar system. Solar observatories saw bits and pieces of the explosion, which remain obscured in view from Earth's orbit.

The explosion was spotted on 31 July at around 2309 UT and Earth-orbiting satellites registered a long-lasting C9.3-class solar flare. "The intensity is probably an underestimate because it was partially eclipsed by the edge of the sun. Nasa's Solar Dynamics Observatory (SDO) saw hot debris flying away from the blast site," space weather, which tracks the solar activity, reported.

While the explosion was powerful, experts have predicted that Earth is not in the line of fire from the Sun. Scientists are expected to get a view of the active region later this week as it comes to sight. Earth is not in the line of fire. The explosion is significant because it may herald an active region set to emerge over the sun's north-eastern limb later this week. A new sunspot group could bring an end to weeks of relative quiet," space weather said in its report.

SubQuestion No : 40

Q.40 Select the most appropriate synonym of the given word from the passage.
Spotted

- Ans** ☒ 1. Witnessed
 ☐ 2. Speckled
 ☐ 3. Splotchy
 ☐ 4. Placed

Question ID : 264330128911

Status : Answered

Chosen Option : 1

Comprehension:

Read the given passage and answer the questions that follow.

As the Sun inches closer to its peak activity in its solar cycle, an explosion has been picked up behind the north-eastern limb of the star in our solar system. Solar observatories saw bits and pieces of the explosion, which remain obscured in view from Earth's orbit.

The explosion was spotted on 31 July at around 2309 UT and Earth-orbiting satellites registered a long-lasting C9.3-class solar flare. "The intensity is probably an underestimate because it was partially eclipsed by the edge of the sun. Nasa's Solar Dynamics Observatory (SDO) saw hot debris flying away from the blast site," space weather, which tracks the solar activity, reported.

While the explosion was powerful, experts have predicted that Earth is not in the line of fire from the Sun. Scientists are expected to get a view of the active region later this week as it comes to sight. Earth is not in the line of fire. The explosion is significant because it may herald an active region set to emerge over the sun's north-eastern limb later this week. A new sunspot group could bring an end to weeks of relative quiet," space weather said in its report.

SubQuestion No : 41

Q.41 Select the most appropriate synonym of the given word from the passage.
Peak

- Ans** ☐ 1. Glance
 ☐ 2. Point
 ☐ 3. Bottom
 ☒ 4. Zenith

Question ID : 264330128910

Status : Answered

Chosen Option : 4

Comprehension:

Read the following passage and answer the questions given after it.

Tens of thousands of people who lost their homes in a catastrophic earthquake huddled around campfires in the bitter cold and clamoured for food and water on Thursday, three days after the temblor hit Turkey and Syria and killed more than 19,300 on Monday, 6th February, 2023.

Emergency crews used pick axes, shovels and jackhammers to dig through twisted metal and concrete - and occasionally still pulled out survivors.

In the Turkish city of Antakya, dozens scrambled for aid in front of a truck distributing children's coats and other supplies. Many of those who lost their homes found shelter in tents, stadiums and other temporary accommodation, but others slept outdoors.

In Antakya, over 100 bodies were awaiting identification in a makeshift morgue outside a hospital.

Authorities called off search-and-rescue operations in the cities of Kilis and Sanliurfa, where destruction was not as severe as in other impacted regions.

The U.N. is authorised to deliver aid through only one border crossing, and road damage has prevented that thus far. U.N. Officials pleaded for humanitarian concerns to take precedence over wartime politics.

The scale of loss and suffering remained massive. Turkish authorities said on Thursday that the death toll had risen to more than 16,100 in the country, with more than 64,000 injured.

In Syria, which includes government-held and rebel-held areas, more than 3,100 have been reported dead and more than 5,000 injured.

Rescue teams urged quiet in the hope of hearing stifled pleas for help, and the Syrian paramedic group known as the White Helmets noted that every second could mean saving a life. But more and more often, the teams pulled out dead bodies.

It was not clear how many people were still unaccounted for in both countries.

Turkey's disaster-management agency said more than 110,000 rescue personnel were now taking part in the effort and more than 5,500 vehicles, including tractors, cranes, bulldozers and excavators had been shipped.

The Foreign Ministry said 95 countries have offered help. More than half of that number have sent a total of nearly 6,500 rescuers. Another 2,400 more are still expected to arrive.

International aid for Syria was far more sparse.

Efforts there have been hampered by the civil war and the isolation of the rebel-held region along the border that is surrounded by Russia-backed government forces.

SubQuestion No : 42

Q.42 How many foreign rescue workers are engaged in the rescue work?

Ans

- ☐ 1. 2400 rescue workers
- ☐ 2. 110,000 rescue workers
- ☐ 3. 5000 rescue workers
- ☒ 4. 6500 rescue workers

Question ID : 264330128801

Status : Answered

Chosen Option : 4

Comprehension:

Read the following passage and answer the questions given after it.

Tens of thousands of people who lost their homes in a catastrophic earthquake huddled around campfires in the bitter cold and clamoured for food and water on Thursday, three days after the temblor hit Turkey and Syria and killed more than 19,300 on Monday, 6th February, 2023.

Emergency crews used pick axes, shovels and jackhammers to dig through twisted metal and concrete - and occasionally still pulled out survivors.

In the Turkish city of Antakya, dozens scrambled for aid in front of a truck distributing children's coats and other supplies. Many of those who lost their homes found shelter in tents, stadiums and other temporary accommodation, but others slept outdoors.

In Antakya, over 100 bodies were awaiting identification in a makeshift morgue outside a hospital.

Authorities called off search-and-rescue operations in the cities of Kilis and Sanliurfa, where destruction was not as severe as in other impacted regions.

The U.N. is authorised to deliver aid through only one border crossing, and road damage has prevented that thus far. U.N. Officials pleaded for humanitarian concerns to take precedence over wartime politics.

The scale of loss and suffering remained massive. Turkish authorities said on Thursday that the death toll had risen to more than 16,100 in the country, with more than 64,000 injured.

In Syria, which includes government-held and rebel-held areas, more than 3,100 have been reported dead and more than 5,000 injured.

Rescue teams urged quiet in the hope of hearing stifled pleas for help, and the Syrian paramedic group known as the White Helmets noted that every second could mean saving a life. But more and more often, the teams pulled out dead bodies.

It was not clear how many people were still unaccounted for in both countries.

Turkey's disaster-management agency said more than 110,000 rescue personnel were now taking part in the effort and more than 5,500 vehicles, including tractors, cranes, bulldozers and excavators had been shipped.

The Foreign Ministry said 95 countries have offered help. More than half of that number have sent a total of nearly 6,500 rescuers. Another 2,400 more are still expected to arrive.

International aid for Syria was far more sparse.

Efforts there have been hampered by the civil war and the isolation of the rebel-held region along the border that is surrounded by Russia-backed government forces.

SubQuestion No : 43

Q.43 Match the words with their meaning.

Words meanings

- a. clamoured 1. checked
b. scrambled 2. screamed
c. hampered 3. jostled

Ans ✓ 1. a-2, b-3, c-1

✗ 2. a-2, b-1, c-3

✗ 3. a-3, b-1, c-2

✗ 4. a-1, b-3, c-2

Question ID : 264330128803

Status : Answered

Chosen Option : 1

Comprehension:

Read the following passage and answer the questions given after it.

Tens of thousands of people who lost their homes in a catastrophic earthquake huddled around campfires in the bitter cold and clamoured for food and water on Thursday, three days after the temblor hit Turkey and Syria and killed more than 19,300 on Monday, 6th February, 2023.

Emergency crews used pick axes, shovels and jackhammers to dig through twisted metal and concrete - and occasionally still pulled out survivors.

In the Turkish city of Antakya, dozens scrambled for aid in front of a truck distributing children's coats and other supplies. Many of those who lost their homes found shelter in tents, stadiums and other temporary accommodation, but others slept outdoors.

In Antakya, over 100 bodies were awaiting identification in a makeshift morgue outside a hospital.

Authorities called off search-and-rescue operations in the cities of Kilis and Sanliurfa, where destruction was not as severe as in other impacted regions.

The U.N. is authorised to deliver aid through only one border crossing, and road damage has prevented that thus far. U.N. Officials pleaded for humanitarian concerns to take precedence over wartime politics.

The scale of loss and suffering remained massive. Turkish authorities said on Thursday that the death toll had risen to more than 16,100 in the country, with more than 64,000 injured.

In Syria, which includes government-held and rebel-held areas, more than 3,100 have been reported dead and more than 5,000 injured.

Rescue teams urged quiet in the hope of hearing stifled pleas for help, and the Syrian paramedic group known as the White Helmets noted that every second could mean saving a life. But more and more often, the teams pulled out dead bodies.

It was not clear how many people were still unaccounted for in both countries.

Turkey's disaster-management agency said more than 110,000 rescue personnel were now taking part in the effort and more than 5,500 vehicles, including tractors, cranes, bulldozers and excavators had been shipped.

The Foreign Ministry said 95 countries have offered help. More than half of that number have sent a total of nearly 6,500 rescuers. Another 2,400 more are still expected to arrive.

International aid for Syria was far more sparse.

Efforts there have been hampered by the civil war and the isolation of the rebel-held region along the border that is surrounded by Russia-backed government forces.

SubQuestion No : 44

Q.44 The passage highlights all the following except

- Ans** ✓ 1. Syria's rebel-held areas and the Civil war going on there
- ✗ 2. the foreign aid being offered to Turkey and Syria
- ✗ 3. the suffering of people in the earthquake hit areas of Turkey and Syria
- ✗ 4. the rescue work being carried out in Turkey and Syria

Question ID : 264330128800

Status : Answered

Chosen Option : 1

Comprehension:

Read the following passage and answer the questions given after it.

Tens of thousands of people who lost their homes in a catastrophic earthquake huddled around campfires in the bitter cold and clamoured for food and water on Thursday, three days after the temblor hit Turkey and Syria and killed more than 19,300 on Monday, 6th February, 2023.

Emergency crews used pick axes, shovels and jackhammers to dig through twisted metal and concrete - and occasionally still pulled out survivors.

In the Turkish city of Antakya, dozens scrambled for aid in front of a truck distributing children's coats and other supplies. Many of those who lost their homes found shelter in tents, stadiums and other temporary accommodation, but others slept outdoors.

In Antakya, over 100 bodies were awaiting identification in a makeshift morgue outside a hospital.

Authorities called off search-and-rescue operations in the cities of Kilis and Sanliurfa, where destruction was not as severe as in other impacted regions.

The U.N. is authorised to deliver aid through only one border crossing, and road damage has prevented that thus far. U.N. Officials pleaded for humanitarian concerns to take precedence over wartime politics.

The scale of loss and suffering remained massive. Turkish authorities said on Thursday that the death toll had risen to more than 16,100 in the country, with more than 64,000 injured.

In Syria, which includes government-held and rebel-held areas, more than 3,100 have been reported dead and more than 5,000 injured.

Rescue teams urged quiet in the hope of hearing stifled pleas for help, and the Syrian paramedic group known as the White Helmets noted that every second could mean saving a life. But more and more often, the teams pulled out dead bodies.

It was not clear how many people were still unaccounted for in both countries.

Turkey's disaster-management agency said more than 110,000 rescue personnel were now taking part in the effort and more than 5,500 vehicles, including tractors, cranes, bulldozers and excavators had been shipped.

The Foreign Ministry said 95 countries have offered help. More than half of that number have sent a total of nearly 6,500 rescuers. Another 2,400 more are still expected to arrive.

International aid for Syria was far more sparse.

Efforts there have been hampered by the civil war and the isolation of the rebel-held region along the border that is surrounded by Russia-backed government forces.

SubQuestion No : 45

Q.45 Why is the International aid much lesser in Syria than in Turkey?

- Ans** ✓ 1. Because Syria is a war –torn country and there are areas under rebels.
- ✗ 2. Because the destruction was not as severe in Syria as in Turkey.
- ✗ 3. Because the UN is allowed only one border crossing and Syria is not allowing that.
- ✗ 4. Because the roads have been damaged there

Question ID : 264330128802

Status : Answered

Chosen Option : 1

Section : General Awareness

Q.1 Match the columns.

Nutrients

- a. Protein
- b. Carbohydrates
- c. Fat
- d. Minerals

Examples

- i. Calcium, Phosphorous
- ii. Cholesterol
- iii. Glucose
- iv. Myosin

- Ans
- ☒ 1. a-i, b-iii, c-ii, d-iv
 - ☒ 2. a-iii, b-iv, c-ii, d-i
 - ☒ 3. a-i, b-ii, c-iii, d-iv
 - ☒ 4. a-iv, b-iii, c-ii, d-i

Question ID : 264330121163

Status : Answered

Chosen Option : 1

Q.2 In India, who appoints the Advocate General of a State?

- Ans
- ☒ 1. Governor of the State
 - ☒ 2. Prime Minister of India
 - ☒ 3. President of India
 - ☒ 4. Chief Minister of the State

Question ID : 264330113409

Status : Answered

Chosen Option : 1

Q.3 When did the Constitution of WHO come into force - a date which we now celebrate as World Health Day every year?

- Ans
- ☒ 1. 5 April 1948
 - ☒ 2. 7 April 1948
 - ☒ 3. 6 April 1948
 - ☒ 4. 8 April 1948

Question ID : 264330123819

Status : Not Answered

Chosen Option : --

Q.4 India was named 'Bharat' after the name of the Bharat tribe. In which of the following Vedas is this tribe first mentioned?

- Ans
- ☒ 1. Rigveda
 - ☒ 2. Samaveda
 - ☒ 3. Atharvaveda
 - ☒ 4. Yajurveda

Question ID : 264330123892

Status : Answered

Chosen Option : 1

Q.5 What do you call the drugs that bind to the receptor site and inhibit its natural function?

- Ans**
- ☐ 1. Antidepressants
 - ☐ 2. Agonist
 - ☒ 3. Antagonists
 - ☐ 4. Depressants

Question ID : 264330123846
Status : Answered
Chosen Option : 1

Q.6 Which of the following statements is/are CORRECT with respect to Draft Information Technology (Intermediary Guidelines and Digital Media Ethics Code) Rules, 2021, proposed in 2022?

- A. Online games will have to register with a self-regulatory body, and only games cleared by the body will be allowed to legally operate in India.
- B. Online gaming companies will not be allowed to engage in betting on the outcome of games, the proposed rules say.
- C. According to the rules, there could be more than one self-regulatory body.

- Ans**
- ☐ 1. A and B only
 - ☒ 2. A, B and C
 - ☐ 3. B and C only
 - ☐ 4. A and C only

Question ID : 264330122808
Status : Answered
Chosen Option : 1

Q.7 When was the None of the Above (NOTA) ballot option first implemented in India?

- Ans**
- ☐ 1. 2015
 - ☐ 2. 2004
 - ☒ 3. 2013
 - ☐ 4. 2010

Question ID : 26433069894
Status : Answered
Chosen Option : 3

Q.8 Which of the following is/are one of the United Nations Sustainable Development Goals?

- (A) Zero Hunger
- (B) Climate Action
- (C) Life Below Water
- (D) Quality Education

- Ans**
- ☒ 1. A, B, C and D
 - ☐ 2. A and B
 - ☐ 3. B and C
 - ☐ 4. A, C and D

Question ID : 264330121482
Status : Answered
Chosen Option : 2

Q.9 Match the columns.

Column-A

- i. Electric current
- ii. Potential difference
- iii. Capacitance
- iv. Inductance

Column-B

- a. Henry
- b. Farad
- c. Volt
- d. Ampere

- Ans
- ☒ 1. i-a, ii-b, iii-c, iv-d
 - ☒ 2. i-b, ii-a, iii-c, iv-d
 - ☒ 3. i-d, ii-c, iii-b, iv-a
 - ☒ 4. i-a, ii-c, iii-b, iv-d

Question ID : 264330109881
Status : Answered
Chosen Option : 3

Q.10 The Supreme Court of India rejected the plea of _____ to quash the summons issued by the Delhi Legislative Assembly's Committee on Peace and Harmony for inquiry related to the Delhi riots in February 2020.

- Ans
- ☒ 1. Instagram
 - ☒ 2. Snapchat
 - ☒ 3. Facebook
 - ☒ 4. Twitter

Question ID : 264330123898
Status : Answered
Chosen Option : 4

Q.11 Which crops are benefitted from the temperate cyclones arising from the Mediterranean Sea that cause rainfall in Punjab?

- Ans
- ☒ 1. Rabi crops
 - ☒ 2. Zaid crops
 - ☒ 3. Cash crops
 - ☒ 4. Kharif crops

Question ID : 264330123843
Status : Answered
Chosen Option : 4

Q.12 The population of India is _____ according to Census 2011.

- Ans
- ☒ 1. 1.4 billion
 - ☒ 2. 1.21 billion
 - ☒ 3. 1.5 billion
 - ☒ 4. 1.11 billion

Question ID : 264330109499
Status : Answered
Chosen Option : 2

Q.13 Which of the following statements are correct regarding the Supreme Court judgement on validity of 103rd Constitutional Amendment Act?

- A. The Supreme Court of India's Constitutional Bench for this case consisted of 5 judges.
- B. The Constitutional Bench upholds the 10% of EWS reservation with 3-2 majority.
- C. As per the Supreme Court judgement, the 103rd Constitutional Amendment is valid although it is violating the Basic Structure of the Indian Constitution.

- Ans
- ☒ 1. A, B and C
 - ☒ 2. A and C only
 - ☒ 3. B and C only
 - ☒ 4. A and B only

Question ID : 264330121542

Status : Answered

Chosen Option : 1

Q.14 Who found an empirical relationship between the half-life of alpha decay and the energy of the emitted alpha particles in 1911?

- Ans
- ☒ 1. Fermi and Meitner
 - ☒ 2. Geiger and Nuttall
 - ☒ 3. Chadwick and Lawrence
 - ☒ 4. Soddy and Aston

Question ID : 264330123835

Status : Not Answered

Chosen Option : --

Q.15 Nutritional care during illness is an organised group of activities which consists of all of the following, EXCEPT:

- Ans
- ☒ 1. assessing psychological stress
 - ☒ 2. assessing nutritional status
 - ☒ 3. planning and prioritising nutrition intervention(s) to meet nutritional needs
 - ☒ 4. diagnosis of nutritional problems

Question ID : 26433055780

Status : Answered

Chosen Option : 1

Q.16 Which of the following Articles mentions about a Uniform Civil Code throughout the territory of India?

- Ans
- ☒ 1. Article 44
 - ☒ 2. Article 39
 - ☒ 3. Article 40
 - ☒ 4. Article 50

Question ID : 264330110112

Status : Not Answered

Chosen Option : --

Q.17 Identify the correct statement.

- Ans** ☒ 1. Newton is a unit of force.
☐ 2. Newton is a unit of power.
☐ 3. Joule is a unit of force.
☐ 4. Joule is a unit of power.

Question ID : 264330109878

Status : **Answered**

Chosen Option : 1

Q.18 Which of the following statements is/are correct regarding Government of India's New Integrated Food Security Scheme?

- A.** This New Integrated Food Security Scheme has been started from 1 January 2023.
B. The Government of India targeted to supply food grains to more than 80 crores beneficiaries under the National Food Security Act.
C. First time this food grains supply programme was brought under the Ministry of Social Justice for effective implementation.

- Ans** ☐ 1. B and C only
☐ 2. A and C only
☐ 3. A, B and C
☒ 4. A and B only

Question ID : 264330122936

Status : **Answered**

Chosen Option : 4

Q.19 Match the columns.

Slash and burn agriculture

(A) Dahiya

(B) Kuruwa

(C) Bringa

(D) Penda

Associated State

(I) Jharkhand

(II) Odisha

(III) Andhra Pradesh

(IV) Madhya Pradesh

- Ans** ☐ 1. A-IV, B-II, C-I, D-III
☐ 2. A-IV, B-III, C-I, D-II
☒ 3. A-IV, B-I, C-II, D-III
☐ 4. A-III, B-I, C-II, D-IV

Question ID : 264330121512

Status : **Not Answered**

Chosen Option : --

Q.20 The intervention of the government whether to expand demand or reduce it constitutes the _____.

- Ans** ☐ 1. speculative function
☐ 2. redistribution function
☒ 3. stabilisation function
☐ 4. transaction function

Question ID : 264330123882

Status : **Answered**

Chosen Option : 1

Q.21 Who had assumed the title of Balban?

- Ans
- ☐ 1. Kabir Khan
 - ☐ 2. Farid Khan
 - ☒ 3. Ulugh Khan
 - ☐ 4. Ayaz Khan

Question ID : 264330109009

Status : Answered

Chosen Option : 3

Q.22 In 1845, which German chemist published a method for the synthesis of acetic acid, a natural product containing two carbon atoms?

- Ans
- ☐ 1. Friedrich Wohler
 - ☐ 2. Marcellin Berthelot
 - ☐ 3. Joseph Gay-Lussac
 - ☒ 4. Hermann Kolbe

Question ID : 26433055758

Status : Not Answered

Chosen Option : --

Q.23 Assume that exchange rate between the US Dollar and Indian Rupee is \$1= ₹55. Now if this exchange rate increases to \$1 = ₹60, then in this case the Indian Rupee has _____ in comparison to the US dollar.

- Ans
- ☒ 1. depreciated
 - ☐ 2. appreciated
 - ☐ 3. Demonetised
 - ☐ 4. overvalued

Question ID : 26433059307

Status : Answered

Chosen Option : 1

Q.24 Consider the following statements about the main reasons for the excessive cold in north India during the cold weather season and identify which of the statements are correct.

- 1.States like Punjab, Haryana and Rajasthan, being far away from the moderating influence of sea, experience continental climate.
- 2.The snowfall in the nearby Himalayan ranges creates a cold wave situation.
- 3.Around February, the cold winds coming from the Caspian Sea and Turkmenistan bring a cold wave along with frost and fog over the northwestern parts of India.

- Ans
- ☐ 1. 1 and 2 only
 - ☐ 2. 2 and 3 only
 - ☒ 3. 1, 2 and 3
 - ☐ 4. 1 and 3 only

Question ID : 264330121531

Status : Answered

Chosen Option : 3

Q.25 In which year, the Koya rebellion took place in the eastern Godavari tract?

- Ans**
- ☒ 1. 1882-1883
 - ☒ 2. 1874-1875
 - ☒ 3. 1879-1880
 - ☒ 4. 1887-1888

Question ID : **264330123888**
Status : **Not Answered**
Chosen Option : --

Section : **Computer Knowledge Module**

Q.1 A _____ is a networking device that filters network traffic while connecting multiple computers or communicating devices.

- Ans**
- ☒ 1. router
 - ☒ 2. gateway
 - ☒ 3. switch
 - ☒ 4. repeater

Question ID : **264330128747**
Status : **Answered**
Chosen Option : **2**

Q.2 Which of the following is not a LibreOffice Software Suite program?

- Ans**
- ☒ 1. LibreOffice Writer
 - ☒ 2. LibreOffice Excel
 - ☒ 3. LibreOffice Calc
 - ☒ 4. LibreOffice Impress

Question ID : **264330128733**
Status : **Answered**
Chosen Option : **3**

Q.3 Which among the following is not a magnetic storage?

- Ans**
- ☒ 1. Winchester disk
 - ☒ 2. Floppy Drive
 - ☒ 3. Memory Card
 - ☒ 4. Magnetic Tape

Question ID : **264330128741**
Status : **Answered**
Chosen Option : **1**

Q.4 Which among the following type of computer is also known as notebook?

- Ans**
- ☐ 1. Micro Computer
 - ☐ 2. Multi Core
 - ☐ 3. Work Station
 - ☒ 4. Laptop Computer

Question ID : **264330128699**
Status : **Answered**
Chosen Option : **1**

Q.5 _____ is the bit-rate of available or consumed information capacity expressed typically in metric multiples of bits per second.

- Ans**
- ☐ 1. Frequency
 - ☐ 2. Protocol
 - ☐ 3. Speed
 - ☒ 4. Bandwidth

Question ID : **264330128732**
Status : **Answered**
Chosen Option : **4**

Q.6 _____ holds address of the active memory location.

- Ans**
- ☐ 1. Stack pointer
 - ☐ 2. Program Counter
 - ☒ 3. Memory Address Register
 - ☐ 4. Instruction Register

Question ID : **264330128745**
Status : **Not Answered**
Chosen Option : **--**

Q.7 Which of the following shortcut key is used to select all cells of the current row in MS-Excel 2010 worksheet?

- Ans**
- ☐ 1. Shift+Page down
 - ☐ 2. Ctrl+Spacebar
 - ☐ 3. Shift+Page up
 - ☒ 4. Shift+Spacebar

Question ID : **264330128729**
Status : **Answered**
Chosen Option : **3**

Q.8 _____ records everything you type on your PC in order to obtain your log-in name, passwords and other sensitive information.

- Ans**
- ☒ 1. Virus
 - ☒ 2. Keyloggers
 - ☒ 3. Worms
 - ☒ 4. Ransomware

Question ID : **264330128768**
Status : **Answered**
Chosen Option : **2**

Q.9 Crypto Locker is a form of which of the following?

- Ans**
- ☒ 1. Ransomware
 - ☒ 2. Adware
 - ☒ 3. Spyware
 - ☒ 4. Worms

Question ID : **264330128694**
Status : **Answered**
Chosen Option : **1**

Q.10 Which of the following is a web browser created and developed by Microsoft?

- Ans**
- ☒ 1. Opera
 - ☒ 2. Chrome
 - ☒ 3. Edge
 - ☒ 4. Brave

Question ID : **264330128698**
Status : **Answered**
Chosen Option : **3**

Q.11 In MS-Word 365, Ctrl + E is the keyboard shortcut to _____.

- Ans**
- ☒ 1. justify the selected text
 - ☒ 2. centre align the selected text
 - ☒ 3. right align the selected text
 - ☒ 4. display the file menu options

Question ID : **264330128743**
Status : **Answered**
Chosen Option : **1**

Q.12 Consider the following statements regarding line spacing of a paragraph in MS-Word 2010:

P: Line spacing determines the amount of vertical space between lines of text in a paragraph.

Q: Line spacing determines the amount of diagonal space between lines of text in a paragraph

Which of the following statement(s) is/are correct?

Ans

- ✓ 1. Only P
- ✗ 2. Both P and Q
- ✗ 3. Neither P nor Q
- ✗ 4. Only Q

Question ID : 264330128715

Status : Answered

Chosen Option : 1

Q.13 Which one of the following folders is used to store deleted emails?

Ans

- ✓ 1. Trash
- ✗ 2. Spam
- ✗ 3. Inbox
- ✗ 4. Drafts

Question ID : 264330128736

Status : Answered

Chosen Option : 1

Q.14 Which among the following ports is also called as mouse port?

Ans

- ✗ 1. Video Graphic Array
- ✗ 2. High Definition Media Interface
- ✗ 3. Firewire
- ✓ 4. PS/2

Question ID : 264330128746

Status : Answered

Chosen Option : 4

Q.15 _____ displays a list of utility configure the computer system and install software and hardware.

Ans

- ✗ 1. Run
- ✓ 2. Control Panel
- ✗ 3. Taskbar
- ✗ 4. Help and Support

Question ID : 264330128730

Status : Answered

Chosen Option : 2

Q.16 _____ was the first browser to display images inline with text instead of displaying images in a separate window.

- Ans**
- ☒ 1. Mozilla
 - ☒ 2. Mosaic
 - ☒ 3. Lynx
 - ☒ 4. Opera

Question ID : **264330128737**
Status : **Answered**
Chosen Option : **2**

Q.17 _____ are a set of wires, which carries a group of bits in parallel and has an associated control scheme. It provides a communication path between two or more devices of a computer system.

- Ans**
- ☒ 1. Buses
 - ☒ 2. Control Unit
 - ☒ 3. Register
 - ☒ 4. Cache

Question ID : **264330128740**
Status : **Answered**
Chosen Option : **1**

Q.18 What will the function given below return in MS-Excel 2010?

`=MATCH(12,{10,13,30,40,60},1)`

- Ans**
- ☒ 1. 0
 - ☒ 2. 1
 - ☒ 3. #N/A
 - ☒ 4. 2


Question ID : **264330128731**
Status : **Answered**
Chosen Option : **1**

Q.19 Which among the following statements is incorrect for input devices?

- Ans**
- ☒ 1. Input devices are also called as peripheral device.
 - ☒ 2. Input devices accepts user data.
 - ☒ 3. Input devices helps computer in receiving data.
 - ☒ 4. Optical Mark Reader is an input device.

Question ID : **264330128704**
Status : **Answered**
Chosen Option : **1**

Q.20 Which among the following statements is incorrect?


Ans  1. A magnetic tape consists of vertical columns called frames.

 2.

Magnetic tape consists of horizontal rows called channels or tracks.

 3.

Magnetic tape drives are not suitable for storage of data that need to be accessed randomly.

 4. There is no addressing in the magnetic tapes.

Question ID : **264330128742**

Status : **Not Answered**

Chosen Option : --

