

CGLE- Combined Graduate Level Tier-I, 2018 Examination

Roll No.	
Registration No.	
Name	
Test Venue	
Test Time	10:00 AM - 11:00 AM
Test Date	10/06/2019

Section : General Intelligence and Reasoning

Q.1 Select the set in which the numbers are related in the same way as are the numbers of the following set.

(17, 12, 7)

- Ans
- 1. (42, 34, 27)
 - 2.
 - 3. (15, 19, 23)
 - 4. (39, 28, 19)

Question ID : 98958013763
Status : Answered
Chosen Option : 4

Q.2 Select the set in which the numbers are related in the same way as are the numbers of the following set.

(5, 24, 7)

- Ans
- 1.
 - 2. (10, 71, 13)
 - 3.
 - 4. (6, 75, 11)

Question ID : 98958013764
Status : Answered
Chosen Option : 1

Q.3

Arrange the following words in a logical and meaningful order.

1. Child
2. Marriage
3. Infant
4. Employment
5. Education

Ans 1. 4, 1, 3, 5, 2

✓ 2.

✗ 3. 3, 5, 2, 4, 1

4. 5, 2, 4, 1, 3

Question ID : 98958013750
Status : Answered
Chosen Option : 2

Q.4

Ans ✗ 1.

✓ 2. Cells

✗ 3. Plants

✗ 4.

Question ID : 98958013753
Status : Answered
Chosen Option : 2

Q.5 Select the word-pair in which the two words are related in the same way as are the two words in the following word-pair.

Barter : Commodities

Ans ✗ 1.

✗ 2. Debate : Discussion

✗ 3. Movement: Traffic

✓ 4. Correspond : Letters

Question ID : 98958013754
Status : Answered
Chosen Option : 4

Q.6

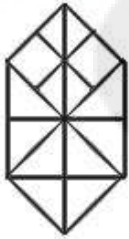
Select the figure in which the given figure is embedded.



Ans

1.

2.



3.



4.

Question ID : 98958013770
Status : Answered
Chosen Option : 1

Q.7

Ans 1. 90

2.

3. 78

4. 80

Question ID : 98958013766
Status : Answered
Chosen Option : 4

Q.8

Ans 1.

2. 523

3.

4.

Question ID : 98958013762
Status : Answered
Chosen Option : 1

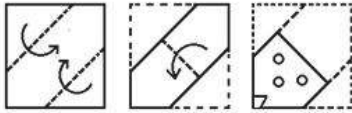
Q.9 Select the option that is related to the third letter-cluster in the same way as the second letter-cluster is related to the first letter-cluster.

DGIL : WTRO :: FHKM : ?

- Ans
- 1. USPN
 - 2. TRON
 - 3.
 - 4. WTSP

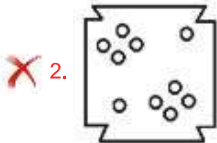
Question ID : 98958013749
Status : Answered
Chosen Option : 1

Q.10 A square paper is folded and cut as shown below. How will it appear when unfolded?

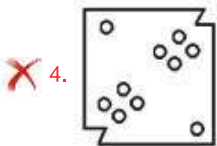


Ans

1.



3.



Question ID : 98958013772
Status : Answered
Chosen Option : 2

Q.11 If HEAD is coded as 37 and BANK is coded as 57, then how will KITE be coded as?

- Ans
- 1.
 - 2.
 - 3.

4.

Question ID : 98958013756

Status : Not Attempted and
Marked For Review

Chosen Option : --

Q.12 Which two signs should be interchanged in the following equation to make it correct?

$$24 - 12 \div 4 + 8 \times 2 = 11$$

Ans 1. + and \times

2. - and \div

3. + and -

4.

Question ID : 98958013765

Status : Answered

Chosen Option : 3

Q.13 Which number will replace the question mark (?) in the following series?

16, 24, 36, ?, 81

Ans 1. 54

2.

3. 61

4. 58

Question ID : 98958013760

Status : Not Attempted and
Marked For Review

Chosen Option : --

Q.14

Ans 1.

2. 12 : 36

3. 9 : 21

4.

Question ID : 98958013761

Status : Not Answered

Chosen Option : --

Q.15 In a code language, PASTEUR is coded as TPRUASE. How would SEVENTY be coded in that language?

Ans 1. ENVETYS

2.

3. ESYETNV

4. ESYTEVN

Question ID : 98958013755
Status : Answered
Chosen Option : 4

Q.16 In a family of seven persons, B is the brother of A and the son of C. D is the son-in-law of C, who has two grandchildren, E and F. A is the mother of F, who is the niece of G. E is the son of G. If C has two children, how is E related D?

- Ans**
- 1. Brother-in-law
 - 2. Son
 - 3. Cousin
 - 4. Nephew

Question ID : 98958013758
Status : Answered
Chosen Option : 4

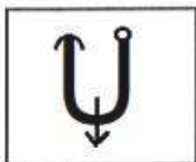
Q.17 Select the figure that will come next in the followi



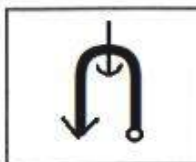
Ans

1.


2.



3.

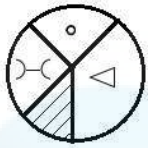


4.



Question ID : 98958013767
Status : Answered
Chosen Option : 4

Q.18 Select the mirror image of the given figure when the mirror is placed to the right of the figure.

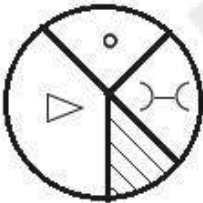


Ans

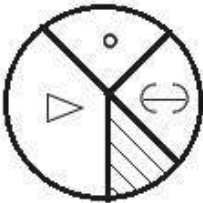
1.

2.

3.



4.



Question ID : 98958013771
Status : Answered
Chosen Option : 3

Q.19

Ans

1.

2. 24

3. 22

4. 18

Question ID : 98958013768
Status : Answered
Chosen Option : 3

Q.20 Three of the following four words are alike in a certain way and one is different. Pick the odd word out.

- Ans** 1.
 2. Hinder
 3. Impede
 4. Arrest

Question ID : 98958013752
Status : Not Answered
Chosen Option : --

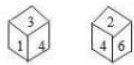
Q.21 Select the combination of letters that when sequentially placed in the gaps of the given letter series will complete the series.

ca _ bab _ ad _ ab _ ad _ ab

- Ans** 1. bcdcb
 2. cdbcd
 3. dcbbc
 4. dcabc

Question ID : 98958013757
Status : Answered
Chosen Option : 3

Q.22 Two different positions of the same dice are shown. Which number will be at the top if 5 is at the bottom?



- Ans** 1. 6
 2. 4
 3. 2
 4. 3

Question ID : 98958013769
Status : Answered
Chosen Option : 2

Q.23 Two statements are given, followed by three conclusions numbered I, II and III. Assuming the statements to be true even if they seem to be at variance with commonly known facts, decide which of the conclusions logically follow(s) from the statements.

Statements:

Some carpenters are technicians.

All technicians are mechanics.

Conclusions:

- I. Some carpenters are mechanics.
- II. Some mechanics are technicians.
- III. All carpenters are mechanics.

- Ans
- 1. None of the conclusions follows
 - 2. Only conclusion I follows
 - 3.
 - 4. Only conclusions II and III follow

Question ID : 98958013759
Status : Answered
Chosen Option : 3

Q.24 Three of the following four letter-clusters are alike in a certain way and one is different. Pick the odd one out.

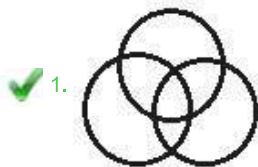
- Ans
- 1. MLKP
 - 2.
 - 3. XVWZ
 - 4. DCBZ

Question ID : 98958013751
Status : Not Answered
Chosen Option : --

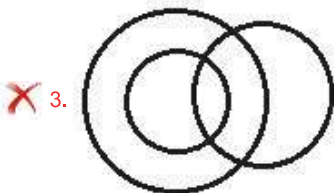
Q.25 Select the Venn diagram that best illustrates the relationship between the following classes.

Indians, Females, Voters

Ans



2.



4. 

Question ID : 98958013773
Status : Answered
Chosen Option : 1

Section : General Awareness

Q.1 In March 2019, the Central Board of Secondary Education (CBSE) announced the introduction of skill subjects in the school curriculum for the academic session 2019-

20. Which of the following is NOT one of them?

- Ans 1. Spiritual Enhancement
 2. Artificial Intelligence (AI)
 3. Yoga
 4. Early Childhood Care Education (ECCE)

Question ID : 98958014372
Status : Not Answered
Chosen Option : --

Q.2 One of the prominent Buddhist structures in India, ____ Stupa at Sarnath was constructed by the great Mauryan king, Ashoka.

- Ans 1. Dhauli
 2. Dhamekh
 3. Bharhut
 4. Lalitgiri

Question ID : 98958014350
Status : Not Answered
Chosen Option : --

Q.3 Which of the following elements is an actinide?

- Ans 1. Ytterbium
 2. Lutetium
 3. Curium
 4. Erbium

Question ID : 98958014355
Status : Not Answered
Chosen Option : --

Q.4 Law of octaves says that if the chemical elements are arranged according to increasing atomic weight, those with similar physical and chemical properties occur after each interval of _____ elements.

- Ans 1. 10
 2. 5
 3. 7
 4. 9

Question ID : 98958014354
Status : Answered
Chosen Option : 3

Q.5 A situation where the expenditure of the government exceeds its revenue is called _____.

- Ans 1. Default Financing
 2. Deficit Revenue
 3. Budget Deficit
 4. Default Revenue

Question ID : 98958014351
Status : Answered
Chosen Option : 3

Q.6 The Global Business Summit, launched on 15 January 2015, is a flagship initiative of the ____ Group.

- Ans
- 1. Economist
 - 2. Bhaskar
 - 3. Times
 - 4. Dutch

Question ID : 98958014352
Status : Answered
Chosen Option : 3

Q.7 Special Olympics, held every ____ years, is a global movement of people creating a new world of inclusion, where every single person is accepted and welcomed, regardless of their ability or disability.

- Ans
- 1. five
 - 2. two
 - 3. three
 - 4. four

Question ID : 98958014369
Status : Not Answered
Chosen Option : --

Q.8 The power to summon the Houses of the Parliament is vested with the ____.

- Ans
- 1. Prime Minister
 - 2. Speaker
 - 3. Vice President
 - 4. President

Question ID : 98958014367
Status : Answered
Chosen Option : 4

Q.9 Superstats, a new platform to analyse the game of cricket, comprises of three metrics. Which of the following is NOT one of them?

- Ans
- 1. Score Index
 - 2. Luck Index
 - 3. Smart Stats
 - 4. Forecaster

Question ID : 98958014370
Status : Not Answered
Chosen Option : --

Q.10 In February 2019, Flight Lieutenant _____ created history by becoming the first Indian woman flight engineer.

- Ans
- 1. Mohana Singh
 - 2. Hina Jaiswal
 - 3. Bhawana Seth
 - 4. Anjali Gupta

Question ID : 98958014371
Status : Answered
Chosen Option : 2

Q.11 Safdarjung's tomb, set in the middle of a garden, was built by Nawab Shuja-ud-Daulah in _____

- Ans
- 1. Uttar Pradesh
 - 2. Uttarakhand
 - 3. Delhi
 - 4. Bihar

Question ID : 98958014349
Status : Answered
Chosen Option : 3

Q.12 _____ married Mehr-un-Nisa whom he gave the title of 'Nur Jahan' (light of the world).

- Ans
- 1. Shah Jahan
 - 2. Aurangzeb
 - 3. Akbar
 - 4. Jahangir

Question ID : 98958014364
Status : Answered
Chosen Option : 4

Q.13 Which of the following elements is a lanthanide?

- Ans
- 1. Actinium
 - 2. Francium
 - 3. Cerium
 - 4. Polonium

Question ID : 98958014357
Status : Not Answered
Chosen Option : --

Q.14 _____ pass connects Uttarakhand and Tibet and is situated in the north of Gangotri.

- Ans
- 1. Zoji La
 - 2. Bara Lacha La
 - 3. Shipki La
 - 4. Muling La

Question ID : 98958014358
Status : Not Answered

Chosen Option : --

Q.15 The Parliament of India consists of _____.

- Ans 1. President, House of the People and Council of States
 2. House of the People
 3. House of the People and Council of States
 4. Council of States

Question ID : 98958014368
Status : Answered
Chosen Option : 1

Q.16 In his periodic table, Mendeleev could NOT assign a correct position to _____.

- Ans 1. Oxygen
 2. Carbon
 3. Nitrogen
 4. Hydrogen

Question ID : 98958014353
Status : Not Answered
Chosen Option : --

Q.17 A nautical mile is equal to _____.

- Ans 1. 2000 metres
 2. 1852 metres
 3. 1672 metres
 4. 2450 metres

Question ID : 98958014359
Status : Not Answered
Chosen Option : --

Q.18 _____, activist-journalist from Karnataka, who was shot dead in September 2017, was posthumously conferred the Anna Politkovskaya Award 2017.

- Ans 1. Gauri Lankesh
 2. Naveen Gupta
 3. Sudip Dutta Bhaumik
 4. Sayed Mehdi

Question ID : 98958014365
Status : Answered
Chosen Option : 1

Q.19 _____ Strait separates the islands of Java (east) and Sumatra.

- Ans 1. Sunda
 2. Yucatan
 3. Malacca
 4. Cook

Question ID : 98958014360
Status : Answered
Chosen Option : 3

Q.20 ____ died in 1605, nearly 50 years after his ascension to the throne. He was buried outside of Agra at Sikandra.

- Ans 1. Akbar
 2. Aurangzeb
 3. Shah Jahan
 4. Jahangir

Question ID : 98958014363
Status : Answered
Chosen Option : 1

Q.21 Swaroop Rawal, an Indian teacher at Lavad Primary School in ____ was in the running for the prestigious Global Teacher Prize 2019 which honours the world's best teacher.

- Ans 1. Gujarat
 2. Maharashtra
 3. Kerala
 4. Tamil Nadu

Question ID : 98958014373
Status : Not Answered
Chosen Option : --

Q.22 ____ has been called the "architect king" as during his reign, the world witnessed a unique development of arts and culture of the Mughal Empire.

- Ans 1. Shah Jahan
 2. Jahangir
 3. Aurangzeb
 4. Akbar

Question ID : 98958014362
Status : Answered
Chosen Option : 1

Q.23 It was under the reign of ____ that the Mughal Empire reached its peak in matter of area.

- Ans 1. Jahangir
 2. Aurangzeb
 3. Shah Jahan
 4. Akbar

Question ID : 98958014361
Status : Not Answered
Chosen Option : --

Q.24 Who among the following gave the 'Law of Octaves'?

- Ans 1. Lavoisier

2. Mendeleev

3. Newlands

4. Dobereiner

Question ID : 98958014356

Status : Answered

Chosen Option : 3

Q.25 Indian origin campaigner _____ was named UK's Most Influential Black Person of the Year on 25 October 2017.

Ans 1. Priti Patel

2. Gina Miller

3. Jonathan Marland

4. David Olusoga

Question ID : 98958014366

Status : Not Answered

Chosen Option : --

Section : Quantitative Aptitude

Q.1 The table shows the production of different types of cars (in thousands).

Cars \ Year	2012	2013	2014	2015	2016
A	46	53	56	58	67
B	50	65	67	66	72
C	43	54	55	47	51
D	47	52	61	65	74
E	48	58	63	64	67

The average production of type A cars during the five years is what percent of the total production of type C cars during the five years?

Ans 1.

2. 20.6

3. 21.8

4.

Question ID : 98958013373

Status : Answered

Chosen Option : 1

Q.2 If $4x^2 - 6x + 1 = 0$, then the value of $8x^3 + (8x^3)^{-1}$ is:

Ans 1.

2. 13

3.

4.

Question ID : 98958013360

Status : Answered

Chosen Option : 3

Q.3

The table shows the production of different types of cars (in thousands).

Cars \ Year	2012	2013	2014	2015	2016
A	46	53	56	58	67
B	50	65	67	66	72
C	43	54	55	47	51
D	47	52	61	65	74
E	48	58	63	64	67

What is the ratio of the total production of type C and D cars in 2012 to the total production of type A cars in 2014 and type E cars in 2015?

- Ans
- 1. 5 : 6
 - 2.
 - 3. 3 : 4
 - 4. 11 : 12

Question ID : 98958013370
 Status : Answered
 Chosen Option : 3

Q.4 The average of twelve numbers is 55.5. The average of the first four numbers is 53.4 and that of the next four numbers is 54.6. The 10th number is greater than the 9th number by 3 but lesser than the 11th and 12th numbers by 2 and 3, respectively. What is the average of the 10th and the 12th numbers?

- Ans
- 1. 59.5
 - 2. 58
 - 3. 57.5
 - 4. 56

Question ID : 98958013351
 Status : Answered
 Chosen Option : 1

Q.5 The table shows the production of different types of cars (in thousands).

Cars \ Year	2012	2013	2014	2015	2016
A	46	53	56	58	67
B	50	65	67	66	72
C	43	54	55	47	51
D	47	52	61	65	74
E	48	58	63	64	67

The total production of type B cars in 2015 and type D cars 2016 is what percent less than the total production of type E cars in five years?

- Ans
- 1.
 - 2.
 - 3. $46\frac{2}{3}$
 - 4.

Question ID : 98958013372
 Status : Answered
 Chosen Option : 4

Q.6

Ans

- 1. 60
- 2. 50
- 3. 65
- 4.

Question ID : 98958013358
Status : Answered
Chosen Option : 2

Q.7 A circle touches the side PQ of a $\triangle APQ$ at the point R and sides AP and AQ produced at the points B and C, respectively. If the perimeter of $\triangle APQ = 30$ cm, then the length of AB is:

- Ans
- 1.
 - 2. 10 cm
 - 3. 12 cm
 - 4.

Question ID : 98958013363
Status : Not Answered
Chosen Option : --

Q.8 The income of A is 40% more than that of B. If A got a 25% rise in his income and the percentage increase in the combined incomes of A and B is:

- Ans
- 1. 31.25
 - 2. 34.5
 - 3. 28.25
 - 4. 24.5

Question ID : 98958013353
Status : Answered
Chosen Option : 1

Q.9 A sum of ₹12,000 amounts to ₹20,736 in 3 years at a certain rate percent per annum, interest compounded annually. What will amount of the same sum to in 2 years at the same rate on compound interest?

- Ans
- 1. ₹15,640
 - 2.
 - 3.
 - 4. ₹14,520

Question ID : 98958013356
Status : Answered
Chosen Option : 3

Q.10 The marked price of an article is ₹550. A shopkeeper allows a discount of 20% and still gets a profit of 10%. If he sells it for ₹470, his profit percent will be:

- Ans
- 1. 16.8
 - 2. 18
 - 3. 17.5
 - 4. 16

Question ID : 98958013352

Status : Answered

Chosen Option : 3

Q.11 The value of $\frac{3}{4} \times 2\frac{2}{3} \div \frac{5}{9}$ of $1\frac{1}{5} + \frac{2}{23} \times 3\frac{5}{6} \div \frac{2}{7}$ of $2\frac{1}{3}$ is:

Ans

1. $1\frac{5}{6}$

2. $1\frac{2}{3}$

✓ 3.

✗ 4.

Question ID : 98958013350

Status : Not Answered

Chosen Option : --

Q.12 In a ΔABC , right angled at B, $AB = 7$ cm and $(AC - BC) = 1$ cm. The value of $(\sec C + \cot A)$ is:

Ans

✗ 1. $\frac{19}{24}$

✓ 2. $\frac{4}{3}$

✗ 3.

✗ 4. 1

Question ID : 98958013368

Status : Answered

Chosen Option : 2

Q.13 The curved surface area and the volume of a cylinder are 264 cm^2 and 924 cm^3 , respectively. What is the ratio of its radius to height? (Take $\pi = \frac{22}{7}$)

Ans

✗ 1.

✗ 2. 5 : 4

✓ 3. 7 : 6

✗ 4. 3 : 2

Question ID : 98958013359

Status : Answered

Chosen Option : 3

Q.14 The ratio of the efficiencies of A, B and C, to do a certain work is 7 : 3 : 5. Working together, they can complete the work in 21 days. A and C worked together for 15 days. The remaining work will be completed by B alone in:

Ans

✗ 1.

2. 45 days

3. 60 days

~~4.~~ 63 days

Question ID : 98958013357
Status : Answered
Chosen Option : 2

Q.15 The table shows the production of different types of cars (in thousands).

Cars \ Year	2012	2013	2014	2015	2016
A	46	53	56	58	67
B	50	65	67	66	72
C	43	54	55	47	51
D	47	52	61	65	74
E	48	58	63	64	67

If the data related to the production of type B cars is represented by a pie chart, then the central angle of the sector representing the production of cars in 2016 is:

- Ans
- ~~1.~~
 - 2.
 - ~~3. 75°~~
 - ~~4.~~

Question ID : 98958013371
Status : Not Answered
Chosen Option : --

Q.16 A bought an article for ₹5,400 and sold it at a loss of 30%. With this amount, he bought another article and sold it at a gain of 60%. What was his overall percentage gain or percentage loss?

- Ans
- ~~1.~~
 - 2. Gain, 12%
 - ~~3. Loss, 12%~~
 - ~~4. Loss, 1.2%~~

Question ID : 98958013354
Status : Answered
Chosen Option : 2

Q.17 In ΔPQR , $QT \perp PR$ and S is a point on QR such that $\angle PSQ = p^\circ$. If $\angle TQR = 46^\circ$ and $\angle SPR = 32^\circ$, then the value of p is:

- Ans
- ~~1.~~
 - ~~2. 82°~~
 - 3.
 - ~~4. 72°~~

Question ID : 98958013365
Status : Answered
Chosen Option : 3

Q.18 If $3\sin\theta = 2\cos^2\theta$, $0^\circ < \theta < 90^\circ$, then the value of $(\tan^2\theta + \sec^2\theta - \operatorname{cosec}^2\theta)$ is:

- Ans
- 1.

2. $-\frac{7}{3}$

3. $\frac{7}{3}$

4. 2

Question ID : 98958013367
Status : Answered
Chosen Option : 2

Q.19 If $\frac{\tan\theta + \sin\theta}{\tan\theta - \sin\theta} = \frac{k+1}{k-1}$, then $k = ?$

Ans 1. $\operatorname{cosec}\theta$

2. $\sec\theta$

3.

4. $\sin\theta$

Question ID : 98958013369
Status : Answered
Chosen Option : 2

Q.20

Ans 1. 1

2.

3.

4. -1

Question ID : 98958013362
Status : Answered
Chosen Option : 2

Q.21 What is the ratio of the mean proportional between 4.8 and 10.8 and the third proportional to 0.4 and 2.4?

Ans 1. 2 : 1

2.

3. 1 : 2

4.

Question ID : 98958013355
Status : Answered
Chosen Option : 1

Q.22 In $\triangle ADC$, E and B are the points on the sides AD and AC respectively such that $\angle ABE = \angle ADC$. If $AE = 6$ cm, $BC = 2$ cm, $BE = 3$ cm and $CD = 5$ cm, then $(AB + DE)$ is equal to:

Ans 1.

2. 16 cm

3.

✓ 4. $\frac{46}{3}$ cm

Question ID : 98958013366
Status : Answered
Chosen Option : 4

Q.23 Let O be the centre of a circle and AC be its diameter. BD is a chord intersecting AC at E. Point A is joined to B and D.
If $\angle BOC = 50^\circ$ and $\angle AOD = 110^\circ$, then $\angle BEC = ?$

- Ans
- ✓ 1.
 - ✗ 2. 70°
 - ✗ 3. 55°
 - ✗ 4.

Question ID : 98958013364
Status : Not Answered
Chosen Option : --

Q.24 If $a^2 + b^2 + c^2 + 27 = 6(a + b + c)$, then what is the value of $\sqrt[3]{a^3 + b^3 - c^3}$?

- Ans
- ✓ 1. 3
 - ✗ 2. 1
 - ✗ 3.
 - ✗ 4. 6

Question ID : 98958013361
Status : Answered
Chosen Option : 1

Q.25

- Ans
- 1.
 - ✗ 2. 3
 - 3. 7
 - ✗ 4. $2\sqrt{7}$

Question ID : 98958013349
Status : Not Answered
Chosen Option : --

Section : English Comprehension

Q.1 Select the correct passive form of the given sentence.

The enemy will have seized the fort before nightfall.

- Ans
- 1. The fort would have been seized by the enemy before nightfall.
 - ✗ 2. The enemy will be seized by the fort before nightfall
 - 3. The fort will have been seized by the enemy before nightfall.
 - ✗ 4. The enemy will seize the fort before nightfall.

Question ID : 98958012644

Status : **Answered**
Chosen Option : 3

Q.2 Given below are four jumbled sentences. Select the option that gives their correct order.

- A. For a split second, as the stranger stepped into the light, his furry head was clearly visible.
- B. At first, all seemed still outside the house, except for the sound of the rain.
- C. Recognizing him, Joe stood petrified staring at the man wearing a long coat, wet from rain.
- D. But then, footsteps approached the house and a stranger emerged out of the darkness.

- Ans
- 1. CABD
 - 2. BCDA
 - 3. DACB
 - 4. BDAC

Question ID : 98958012655
Status : **Answered**
Chosen Option : 4

Q.3 Select the most appropriate antonym of the given word.

NOTORIOUS

- Ans
- 1. famous
 - 2. vicious
 - 3. infamous
 - 4. disgraceful

Question ID : 98958012658
Status : **Not Answered**
Chosen Option : --

Q.4 Select the correctly spelt word.

- Ans
- 1. maintenance
 - 2. mentainance
 - 3. maintenence
 - 4. maintainence

Question ID : 98958012664
Status : **Answered**
Chosen Option : 1

Q.5 Select the most appropriate option to substitute the underlined segment in the given sentence. If no substitution is required, select No improvement.

Though many European traders visit Puducherry in the sixteenth century onwards, what remains today is a relic of its French past.

- Ans
- 1. No improvement
 - 2. traders visited Puducherry in a sixteenth century onward
 - 3. traders visited Puducherry from the sixteenth century onwards
 - 4. trader visit Puducherry from the sixteenth century onwards

Question ID : 98958012646
Status : Answered
Chosen Option : 3

Q.6 Select the most appropriate antonym of the given word.

SACRED

- Ans
- 1. perpetual
 - 2. pious
 - 3. profane
 - 4. profound

Question ID : 98958012659
Status : Answered
Chosen Option : 3

Q.7 Select the most appropriate meaning of the underlined idiom in the given sentence.

It is unfortunate that most people in the country are still living from hand to mouth.

- Ans
- 1. consuming daily what little is earned
 - 2. saving for the future generations
 - 3. doing manual labour
 - 4. earning wealth by selfish means

Question ID : 98958012660
Status : Answered
Chosen Option : 1

Q.8 Select the most appropriate meaning of the underlined idiom in the given sentence.

The loyal watchman was cut to the quick when he was accused of theft.

- Ans
- 1. imprisoned
 - 2. severely punished
 - 3. hurt intensely
 - 4. dismissed

Question ID : 98958012661
Status : Answered
Chosen Option : 4

Q.9 In the sentence identify the segment which contains the grammatical error.

Most disputes can be solved amicably unless one are not rigid.

- Ans
- 1. Most disputes
 - 2. can be solved amicably
 - 3. unless one are
 - 4. not rigid

Question ID : 98958012642
Status : Answered
Chosen Option : 3

Q.10 Select the correct active form of the given sentence.

She was seen sitting in the last row.

- Ans
- 1. We see her sitting in the last row.
 - 2. We saw her sitting in the last row.
 - 3. We had seen her sitting in the last row.
 - 4. We have seen her sitting in the last row.

Question ID : 98958012645
Status : Answered
Chosen Option : 2

Q.11 Select the word which means the same as the group of words given.

One who is indifferent to art and culture

- Ans
- 1. cynic
 - 2. scientist
 - 3. philanderer
 - 4. philistine

Question ID : 98958012663
Status : Answered
Chosen Option : 1

Q.12 Select the most appropriate option to substitute the underlined segment in the given sentence. If no substitution is required, select No improvement.

The India consensus study highlight a benefits by adding domestic violence prevention approaches to current government policy.

- Ans
- 1. highlight the benefits from added
 - 2. highlight a benefit in addition
 - 3. No improvement
 - 4. highlights the benefits of adding

Question ID : 98958012647
Status : Answered
Chosen Option : 4

Q.13 Select the word which means the same as the group of words given.

One who embraces voluntary death for the sake of one's country

- Ans
- 1. fanatic
 - 2. martyr
 - 3. patriot
 - 4. diplomat

Question ID : 98958012662
Status : Answered
Chosen Option : 2

Q.14 Given below are four jumbled sentences. Select the option that gives their correct order.

A. The students often go about their business, singing along in the corridors.

- B. But for the students of St. Ambrose High School, it no longer dictates their day.
C. A bell can sound gloomy or cheerful depending on when it is rung.
D. It has been scrapped in favour of music which now breaks up the timetable of the school .

- Ans 1. CADB
 2. BDAC
 3. CBDA
 4. ACBD

Question ID : 98958012654
Status : Answered
Chosen Option : 4

Q.15 Select the most appropriate synonym of the given word.

PRECARIOUS

- Ans 1. abundant
 2. dangerous
 3. valuable
 4. premature

Question ID : 98958012657
Status : Answered
Chosen Option : 2

Q.16 Select the most appropriate synonym of the given word.

STERILE

- Ans 1. pure
 2. productive
 3. barren
 4. sordid

Question ID : 98958012656
Status : Answered
Chosen Option : 3

Q.17 In the sentence identify the segment which contains the grammatical error.

In the northern suburbs of Bengaluru, home to the bulk of the information technology industry, the water crisis is even worst.

- Ans 1. home to the bulk of
 2. is even worst
 3. the water crisis
 4. In the northern suburbs

Question ID : 98958012643
Status : Not Answered
Chosen Option : --

Comprehension:

In the following passage some words have been deleted. Fill in the blanks with the help of the alternatives given. Select the most appropriate option for each blank.

Perhaps India should listen to her (1)_____ sages who taught the importance (2)_____ balance. This means we should be (3)_____ not to take anything too far (4)_____ be too radical. The unfortunate results of (5)_____ - too far are obvious in the environmental degradation.

SubQuestion No : 18

Q.18 Select the most appropriate option to fill in blank No.1.

- Ans
- 1. extinct
 - 2. ancient
 - 3. initial
 - 4. antique

Question ID : 98958012649
Status : Answered
Chosen Option : 2

Comprehension:

In the following passage some words have been deleted. Fill in the blanks with the help of the alternatives given. Select the most appropriate option for each blank.

Perhaps India should listen to her (1)_____ sages who taught the importance (2)_____ balance. This means we should be (3)_____ not to take anything too far (4)_____ be too radical. The unfortunate results of (5)_____ - too far are obvious in the environmental degradation.

SubQuestion No : 19

Q.19 Select the most appropriate option to fill in blank No.2.

- Ans
- 1. for
 - 2. in
 - 3. of
 - 4. by

Question ID : 98958012650
Status : Answered
Chosen Option : 3

Comprehension:

In the following passage some words have been deleted. Fill in the blanks with the help of the alternatives given. Select the most appropriate option for each blank.

Perhaps India should listen to her (1)_____ sages who taught the importance (2)_____ balance. This means we should be (3)_____ not to take anything too far (4)_____ be too radical. The unfortunate results of (5)_____ - too far are obvious in the environmental degradation.

SubQuestion No : 20

Q.20 Select the most appropriate option to fill in blank No.3.

- Ans
- 1. careless
 - 2. careful
 - 3. carefree
 - 4. caretaker

Question ID : 98958012651
Status : Answered
Chosen Option : 2

Comprehension:

In the following passage some words have been deleted. Fill in the blanks with the help of the alternatives given. Select the most appropriate option for each blank.

Perhaps India should listen to her (1) _____ sages who taught the importance (2) _____ balance. This means we should be (3) _____ not to take anything too far (4) _____ be too radical. The unfortunate results of (5) _____ - too far are obvious in the environmental degradation.

SubQuestion No : 21

Q.21 Select the most appropriate option to fill in blank No.4.

- Ans 1. but
 2. otherwise
 3. so
 4. or

Question ID : 98958012652
Status : Answered
Chosen Option : 4

Comprehension:

In the following passage some words have been deleted. Fill in the blanks with the help of the alternatives given. Select the most appropriate option for each blank.

Perhaps India should listen to her (1) _____ sages who taught the importance (2) _____ balance. This means we should be (3) _____ not to take anything too far (4) _____ be too radical. The unfortunate results of (5) _____ - too far are obvious in the environmental degradation.

SubQuestion No : 22

Q.22 Select the most appropriate option to fill in blank No.5.

- Ans 1. venturing
 2. pioneering
 3. climbing
 4. risking

Question ID : 98958012653
Status : Answered
Chosen Option : 1

Q.23 Select the correctly spelt word.

- Ans 1. adolescence
 2. adolesense
 3. adolescense
 4. adolescance

Question ID : 98958012665
Status : Answered
Chosen Option : 1

Q.24 Select the most appropriate option to fill in the blank.

She performs different roles very convincingly as she is a very _____ actor.

- Ans 1. virtuous
 2. voracious
 3. versatile

4. verbose

Question ID : 98958012666
Status : Answered
Chosen Option : 3

Q.25 Select the most appropriate option to fill in the blank.

Charles Dickens was different in his style of writing from most of his _____ in the Victorian era.

Ans 1. contemporaries

2. cronies

3. critics

4. confidants

Question ID : 98958012667
Status : Answered
Chosen Option : 1