

CGLE- Combined Graduate Level Tier-I, 2018 Examination

Roll No.	
Registration No.	
Name	
Test Venue	
Test Time	10:00 AM - 11:00 AM
Test Date	11/06/2019

Section : General Intelligence and Reasoning

Q.1 Priyank is Akshay's brother. Sonia is Saksham's sister. Akshay is Sonia's son. How is Priyank related to Sonia?

- Ans
- 1. Nephew
 - 2. Father
 - 3. Son
 - 4. Brother

Question ID : **98958013833**
Status : **Answered**
Chosen Option : **3**

Q.2 At a party, the number of girls is half the number of boys. After an hour, five boys leave the party and three girls join the party. How many people were present at the party an hour before?

- Ans
- 1. 16
 - 2. 8
 - 3. 24
 - 4. 22

Question ID : **98958013841**
Status : **Not Attempted and Marked For Review**
Chosen Option : **--**

Q.3 Three of the following four words are alike in a certain way and one is different. Pick the odd word out.

- Ans
- 1. Thorium
 - 2. Uranium
 - 3. Radium
 - 4. Sodium

Question ID : **98958013827**
Status : **Answered**
Chosen Option : **4**

Q.4 Select the word pair in which the two words are related in the same way as the two words in the following word-pair.

Brass : Copper

- Ans
- 1. Chromium : Silver
 - 2. Bronze : Gold
 - 3. Nickle : Iron

✓ 4. Solder : Tin

Question ID : 98958013829
Status : Answered
Chosen Option : 1

Q.5 Find the missing number from the below options.

17 22 37

23 28 43

16 ? 36

- Ans
- ✗ 1. 12
 - ✗ 2. 32
 - ✓ 3. 21
 - ✗ 4. 34

Question ID : 98958013838
Status : Not Answered
Chosen Option : --

Q.6 Select the terms that will replace the ? in the following series.

Z, X, V, ?, R, P, ?

- Ans
- ✗ 1. S, N
 - ✗ 2. S, O
 - ✗ 3. T, O
 - ✓ 4. T, N

Question ID : 98958013832
Status : Answered
Chosen Option : 4

Q.7 Arrange the following words in a logical and meaningful order.

- 1) Write
- 2) Publish
- 3) Author
- 4) Reader
- 5) Sale

- Ans
- ✓ 1. 3, 1, 2, 5, 4
 - ✗ 2. 4, 3, 1, 2, 5
 - ✗ 3. 3, 2, 1, 5, 4
 - ✗ 4. 1, 3, 2, 5, 4

Question ID : 98958013825
Status : Answered
Chosen Option : 1

Q.8 Select the term that will come next in the following series.

OBE, PDH, QFK, RHN, ?

- Ans
- 1. SKQ
 - 2. RJQ
 - 3. SJQ
 - 4. SJP

Question ID : 98958013824
Status : Answered
Chosen Option : 3

Q.9 Select the correct mirror image of the given figure when the mirror is placed to the right of the figure.

R 7 M P

Ans

1.

R 7 M P

2.

R M 7 P

3.

P M 7 R

4.

P M 7 R

Question ID : 98958013846
Status : Answered
Chosen Option : 1

Q.10 Which two signs should be interchanged in the following equation to make it correct?

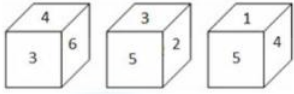
$$24 \div 8 - 5 \times 5 + 3 = 13$$

Ans

- 1. \times and $-$
- 2. \times and $+$
- 3. \div and \times
- 4. \div and $+$

Question ID : 98958013840
Status : Answered
Chosen Option : 1

Q.11 Three different positions of a dice are shown below. Which number appears on the face opposite the number 6?



- Ans
- 1. 1
 - 2. 2
 - 3. 4
 - 4. 5

Question ID : 98958013844
 Status : Answered
 Chosen Option : 4

Q.12 If AU = 21 and EGG = 245, then how will you code BAKE?

- Ans
- 1. 19
 - 2. 75
 - 3. 110
 - 4. 155

Question ID : 98958013831
 Status : Answered
 Chosen Option : 3

Q.13 'Cheerful' is related to 'Sad' in the same way as 'Generous' is related to _____.

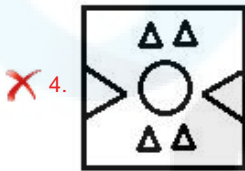
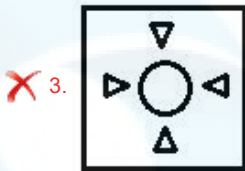
- Ans
- 1. Gloomy
 - 2. Kind
 - 3. Selfish
 - 4. Intelligent

Question ID : 98958013828
 Status : Answered
 Chosen Option : 3

Q.14 A square paper is folded and cut as shown below. How will it appear when unfolded?



- Ans
- 1.

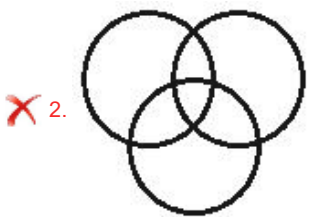
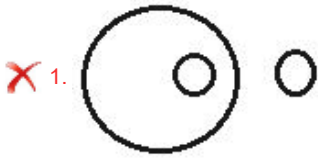


Question ID : 98958013847
 Status : Answered
 Chosen Option : 2

Q.15 Choose the Venn diagram from the given options which best represents the relationship amongst the following classes:

Wheat, Mustard, Cabbage

Ans



Question ID : 98958013848
 Status : Answered
 Chosen Option : 4

Q.16 In a code language, NEEDLE is written as MFDEKF. How will HAMMER be written in the same language?

- Ans
- ✗ 1. GBLNFT
 - ✗ 2. IBLNDS
 - ✗ 3. GALNDS
 - ✓ 4. GBLNDS

Question ID : 98958013830
Status : Answered
Chosen Option : 4

Q.17 Find the missing number from the below options.

4 3 19

6 4 40

9 9 ?

- Ans 1. 90
 2. 80
 3. 72
 4. 100

Question ID : 98958013839
Status : Answered
Chosen Option : 1

Q.18 Three of the following four number-pairs are alike in a certain way and one is different. Pick the odd one out.

- Ans 1. 65-101
 2. 26-50
 3. 17-37
 4. 49-82

Question ID : 98958013837
Status : Not Attempted and Marked For Review
Chosen Option : --

Q.19 Two statements are given, followed by two conclusions numbered I and II. Assuming the statements to be true, even if they seem to be at variance with commonly known facts, decide which of the conclusions logically follow(s) from the statements.

Statements:

All teachers are painters.
Some painters are rich.

Conclusions:

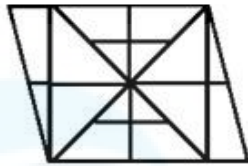
I. All painters are teachers.
II. Some rich are not painters.

- Ans 1. Only conclusion II follows
 2. Neither conclusion I nor II follows
 3. Only conclusion I follows
 4. Either conclusion I or II follows

Question ID : 98958013834
Status : Answered
Chosen Option : 2

Q.20

How many triangles are there in the following figure?



- Ans
- 1. 16
 - 2. 30
 - 3. 32
 - 4. 22

Question ID : 98958013843
Status : Not Answered
Chosen Option : --

Q.21 Select the option that is related to the third number in the same way as the second number is related to the first number.

2139 : 3246 :: 4262 : _____.

- Ans
- 1. 1461
 - 2. 2471
 - 3. 2371
 - 4. 2483

Question ID : 98958013836
Status : Answered
Chosen Option : 2

Q.22 Select the term that will come next in the following series.

57, 62, 31, 36, 18, ?

- Ans
- 1. 34
 - 2. 23
 - 3. 19
 - 4. 36

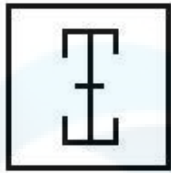
Question ID : 98958013835
Status : Answered
Chosen Option : 2

Q.23 Three of the following four letter-clusters are alike in a certain way and one is different. Pick the odd one out.

- Ans
- 1. FGE
 - 2. NOR
 - 3. KLJ
 - 4. YZX

Question ID : 98958013826
Status : Answered
Chosen Option : 2

Q.24 Select the figure in which the given figure is embedded.




Ans

✓ 1.



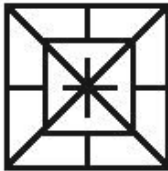
✗ 2.



✗ 3.



✗ 4.

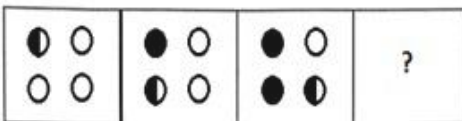


Question ID : 98958013845

Status : Answered


Chosen Option : 1

Q.25 Select the figure that will come next in the following figure series.




Ans


✓ 1.




✗ 2.



3.



4.



Question ID : 98958013842
Status : Answered
Chosen Option : 1

Section : General Awareness

Q.1 The Sepoy Mutiny in India started from _____.

- Ans
- 1. Rajkot
 - 2. Meerut
 - 3. Bareilly
 - 4. Champaran

Question ID : 98958014438
Status : Not Answered
Chosen Option : --

Q.2 What is the term of the elected representatives of a Gram Panchayat?

- Ans
- 1. 5 years
 - 2. 3 years
 - 3. 2 years
 - 4. 4 years

Question ID : 98958014424
Status : Answered
Chosen Option : 1

Q.3 Marfati' songs are traditional folk songs of _____.

- Ans
- 1. Afghanistan
 - 2. Bangladesh
 - 3. Pakistan
 - 4. Nepal

Question ID : 98958014424
Status : Not Answered
Chosen Option : --

Q.4 Which scientist discovered the 'Penicillin'?

- Ans
- 1. Louis Pasteur
 - 2. Alexander Fleming

3. Robert Koch

4. Ernst Chain

Question ID : 98958014431
Status : Answered
Chosen Option : 2

Q.5 Which of the following stars is nearest to the sun?

Ans 1. Proxima Centauri

2. Deneb

3. Sirius

4. Betelgeuse

Question ID : 98958014429
Status : Answered
Chosen Option : 1

Q.6 Name the national bird of Bhutan.

Ans 1. Magpai

2. Peacock

3. Parrot

4. Raven

Question ID : 98958014425
Status : Not Answered
Chosen Option : --

Q.7 The term 'cherry picking' is used in which sport?

Ans 1. Table Tennis

2. Swimming

3. Basketball

4. Cricket

Question ID : 98958014444
Status : Answered
Chosen Option : 1

Q.8 Which of the following creatures is oviparous?

Ans 1. Frog

2. Rabbit

3. Mouse

4. Squirrel

Question ID : 98958014430
Status : Not Answered
Chosen Option : --

Q.9 The summer solstice 2019 in the Northern Hemisphere will occur on _____.

Ans 1. 24th June

2. 21st June

3. 26th June

4. 20th June

Question ID : 98958014434
Status : Answered
Chosen Option : 2

Q.10 Jorwe culture' was a Chalcolithic archaeological site located in the present day Indian state of _____.

Ans 1. Assam

2. Maharashtra

3. Gujarat

4. Bihar

Question ID : 98958014436
Status : Not Answered
Chosen Option : --

Q.11 Which of the following acids is present in ant bites?

Ans 1. Formic acid

2. Malic acid

3. Perchloric acid

4. Nitric acid

Question ID : 98958014432
Status : Answered
Chosen Option : 1

Q.12 Which of the following authors received the Jnanpith Award in 2018?

Ans 1. Arundhati Roy

2. Vikram Seth

3. Kiran Desai

4. Amitav Ghosh

Question ID : 98958014441
Status : Answered
Chosen Option : 4

Q.13 In India, 24th January is observed as which one of the following days?

Ans 1. National Farmer's Day

2. National Girl Child Day

3. National Agricultural Day

4. National Day of Elderly

Question ID : 98958014446
Status : Answered
Chosen Option : 2

Q.14 Which of the following is the smallest bird in the world?

- Ans
- 1. Finch
 - 2. Diamond Firetail
 - 3. Bee Hummingbird
 - 4. Robin

Question ID : 98958014428
Status : Answered
Chosen Option : 3

Q.15 Who among the following was named as the Chief Executive Officer of International Cricket Council (ICC) in January 2019?

- Ans
- 1. Saurav Ganguly
 - 2. Anurag Thakur
 - 3. Manu Sawhney
 - 4. N G Khaitan

Question ID : 98958014448
Status : Answered
Chosen Option : 3

Q.16 Who was the Indian Army Chief at the time of Bangladesh Liberation War?

- Ans
- 1. Roy Bucher
 - 2. Rob Lockhart
 - 3. K M Cariappa
 - 4. Sam Manekshaw

Question ID : 98958014439
Status : Answered
Chosen Option : 4

Q.17 The demand for a commodity or service which is a consequence of the demand for something else is called _____.

- Ans
- 1. Income Demand
 - 2. Direct Demand
 - 3. Composite Demand
 - 4. Derived Demand

Question ID : 98958014427
Status : Not Answered
Chosen Option : --

Q.18 In which year was the East India Company incorporated for the exploitation of trade with East and Southeast Asia and India?

- Ans
- 1. 1612
 - 2. 1605
 - 3. 1600
 - 4. 1596

Question ID : 98958014437
Status : Not Answered
Chosen Option : --

Q.19 Which economist gave the theory of Opportunity Cost?

- Ans
- 1. Milton Friedman
 - 2. Adam Smith
 - 3. John Keynes
 - 4. Gottfried Haberler

Question ID : 98958014426
Status : Not Answered
Chosen Option : --

Q.20 Who among the following wrote the book 'A History of the Sikhs'?

- Ans
- 1. Bhai Vir Singh
 - 2. Khushwant Singh
 - 3. Amrita Pritam
 - 4. Gurbachan Singh Talib

Question ID : 98958014440
Status : Not Answered
Chosen Option : --

Q.21 Vijay Hazare was a famous Indian player associated with the sport of _____.

- Ans
- 1. Football
 - 2. Cricket
 - 3. Rifle Shooting
 - 4. Boxing

Question ID : 98958014445
Status : Answered
Chosen Option : 2

Q.22 Fertile riverine alluvial soil is best suited for producing _____.

- Ans
- 1. rice
 - 2. tea
 - 3. cotton
 - 4. Corn

Question ID : 98958014433
Status : Answered
Chosen Option : 3

Q.23 The energy derived from the heat of Earth is called _____.

- Ans
- 1. Geothermal Energy
 - 2. Solar Energy
 - 3. Biogas

4. Tidal Energy

Question ID : 98958014435
Status : Answered
Chosen Option : 1

Q.24 Which article of the Constitution of India talks about the provisions for impeachment of the President of India?

- Ans
- 1. Article 51
 - 2. Article 61
 - 3. Article 54
 - 4. Article 63

Question ID : 98958014443
Status : Answered
Chosen Option : 2

Q.25 Identify the foreigner who has been conferred the second highest civilian award in India, Padma Vibhushan for 'exceptional and distinguished service' in 2019.

- Ans
- 1. John Chambers
 - 2. Ismail Omar Guelleh
 - 3. Pravin Gordhan
 - 4. Kader Khan

Question ID : 98958014447
Status : Not Answered
Chosen Option : --

Section : Quantitative Aptitude

Q.1 The difference between the compound interest and simple interest on ₹ x at 8.5% per annum for 2 years is ₹28.90. The value of x is:

- Ans
- 1. 3500
 - 2. 3800
 - 3. 4000
 - 4. 4500

Question ID : 98958013431
Status : Answered
Chosen Option : 3

Q.2 If $\cot \theta = \frac{3}{4}$, then $\sin \theta + \cos \theta - \tan \theta$ is equal to:

- Ans
- 1. $-\frac{1}{20}$
 - 2. $\frac{2}{15}$
 - 3. $\frac{1}{20}$
 - 4. $\frac{1}{15}$

Question ID : 98958013443
Status : Answered
Chosen Option : 4

Q.3 The following table indicates the number of students studying in three disciplines in five colleges:

Disciplines	Colleges				
	A	B	C	D	E
Science	300	350	275	400	275
Commerce	250	400	325	275	250
Economics	400	450	250	300	500

What is the ratio of the total number of students studying in the science stream to that of studying in commerce stream in all five colleges taken together?

- Ans 1. 16 : 15
 2. 16 : 19
 3. 14 : 15
 4. 19 : 15

Question ID : 98958013445
Status : Answered
Chosen Option : 1

Q.4 The following table indicates the number of students studying in three disciplines in five colleges:

Disciplines	Colleges				
	A	B	C	D	E
Science	300	350	275	400	275
Commerce	250	400	325	275	250
Economics	400	450	250	300	500

What percentage of total students are studying in the commerce stream in all five colleges together?

- Ans 1. 28%
 2. 30%
 3. 32%
 4. 33%

Question ID : 98958013447
Status : Answered
Chosen Option : 2

Q.5 If $a : b = 5 : 3$, then $(8a - 5b) : (8a + 5b)$ is equal to:

- Ans 1. 3 : 13
 2. 2 : 5
 3. 3 : 11
 4. 5 : 11

Question ID : 98958013430
Status : Answered
Chosen Option : 4

Q.6 The average marks of 45 students was found to be 66. If the marks of two students were incorrectly entered as 28 and 64 instead of 82 and 46 respectively, then what is the correct average?

- Ans 1. 67.2

- 2. 66.8
- 3. 66.4
- 4. 66.6

Question ID : 98958013426
Status : Answered
Chosen Option : 2

Q.7 If $\sqrt{x} + \frac{1}{\sqrt{x}} = \sqrt{6}$, then $x^2 + \frac{1}{x^2}$ is equal to:

- Ans
- 1. 62
 - 2. 14
 - 3. 16
 - 4. 36

Question ID : 98958013436
Status : Answered
Chosen Option : 2

Q.8 The price of sugar is increased by 22%. A person wants to increase his expenditure by 12% only. By what percent should he decrease his consumption, nearest to one decimal place?

- Ans
- 1. 10%
 - 2. 7.8%
 - 3. 8.2%
 - 4. 8.6%

Question ID : 98958013428
Status : Answered
Chosen Option : 3

Q.9 An article is sold for ₹657.90 after successive discounts of 15% and 10%. What is the marked price of the article?

- Ans
- 1. ₹920
 - 2. ₹860
 - 3. ₹900
 - 4. ₹880

Question ID : 98958013427
Status : Answered
Chosen Option : 2

Q.10 The radii of two circular faces of the frustum of a cone of height 21 cm are 3 cm and 2 cm respectively. What is the volume of the frustum of the cone in cm^3 ($\pi = \frac{22}{7}$)?

- Ans
- 1. 154
 - 2. 286
 - 3. 345
 - 4. 418

Question ID : 98958013434

Status : **Answered**
Chosen Option : 4

Q.11 The value of:

$$2.8 + (5.2 \div 1.3 \times 2) - 6 \times 3 \div 8 + 2$$

- Ans
- 1. 6.45
 - 2. 4.55
 - 3. 8.45
 - 4. 10.55

Question ID : 98958013425
Status : **Answered**
Chosen Option : 4

Q.12 The value of $\sec^2 28^\circ - \cot^2 62^\circ + \sin^2 60^\circ + \operatorname{cosec}^2 30^\circ$ is equal to:

- Ans
- 1. $\frac{7}{2}$
 - 2. 3
 - 3. $\frac{19}{4}$
 - 4. $\frac{23}{4}$

Question ID : 98958013444
Status : **Answered**
Chosen Option : 4

Q.13 Two articles are sold for ₹10,005 each. On one, the seller gains 15% and on the other, he loses 13%. What is his overall gain or loss percent, correct to two decimal places?

- Ans
- 1. 1.42% gain
 - 2. 1.42% loss
 - 3. 0.94% loss
 - 4. 0.94% gain

Question ID : 98958013429
Status : **Not Answered**
Chosen Option : --

Q.14 In ΔABC , AD is a median and P is a point on AD such that AP : PD = 3 : 4. Then $\ar(\Delta APB) : \ar(\Delta ABC)$ is equal to:

- Ans
- 1. 2 : 7
 - 2. 3 : 4
 - 3. 3 : 7
 - 4. 3 : 14

Question ID : 98958013440
Status : **Not Answered**
Chosen Option : --

Q.15 If $a + b + c = 8$ and $ab + bc + ca = 12$, then $a^3 + b^3 + c^3 - 3abc$ is equal to:

- Ans
- 1. 192
 - 2. 224
 - 3. 144
 - 4. 400

Question ID : 98958013437
Status : Answered
Chosen Option : 2

Q.16 The following table indicates the number of students studying in three disciplines in five colleges:

Disciplines	Colleges				
	A	B	C	D	E
Science	300	350	275	400	275
Commerce	250	400	325	275	250
Economics	400	450	250	300	500

If a pie-chart is drawn representing the number of students in all five colleges, what is the central angle (correct to the nearest whole number) of the sector representing the students of college B?

- Ans
- 1. 80°
 - 2. 82°
 - 3. 84°
 - 4. 86°

Question ID : 98958013448
Status : Answered
Chosen Option : 4

Q.17 Chords AB and CD of a circle, when produced, meet at a point P outside the circle. If AB = 6 cm, CD = 3 cm and PD = 5 cm, then PB is equal to:

- Ans
- 1. 6 cm
 - 2. 6.25 cm
 - 3. 5 cm
 - 4. 4 cm

Question ID : 98958013438
Status : Answered
Chosen Option : 4

Q.18 A is 40% more efficient than B and C is 20% less efficient than B. Working together, they can finish a task in 15 days. In how many days, will B alone complete 75% of the task?

- Ans
- 1. 36
 - 2. 48
 - 3. 32
 - 4. 44

Question ID : 98958013432
Status : Answered
Chosen Option : 1

Q.19 In a circle with centre O, AB is the diameter and CD is a chord such that ABCD is a trapezium. If $\angle BAC = 25^\circ$, then $\angle CAD$ is equal to:

- Ans
- 1. 45°
 - 2. 65°
 - 3. 40°
 - 4. 25°

Question ID : 98958013439
Status : Answered
Chosen Option : 3

Q.20 If $\tan 4\theta = \cot(2\theta + 30^\circ)$, then θ is equal to:

- Ans
- 1. 15°
 - 2. 10°
 - 3. 20°
 - 4. 25°

Question ID : 98958013442
Status : Answered
Chosen Option : 2

Q.21 If $a + b = 5$ and $ab = 3$, then $(a^3 + b^3)$ is equal to:

- Ans
- 1. 70
 - 2. 75
 - 3. 80
 - 4. 65

Question ID : 98958013435
Status : Answered
Chosen Option : 3

Q.22 What is the least value of x such that $517x324$ is divisible by 12?

- Ans
- 1. 3
 - 2. 1
 - 3. 0
 - 4. 2

Question ID : 98958013424
Status : Answered
Chosen Option : 4

Q.23 A train without stoppage travels with an average speed of 65 km/h and with stoppage, it travels with an average speed of 52 km/h. For how many minutes does the train stop on an average per hour?

- Ans
- 1. 13
 - 2. 15
 - 3. 12
 - 4. 14

Question ID : 98958013433

Status : **Answered**
Chosen Option : 3

Q.24 The following table indicates the number of students studying in three disciplines in five colleges:

Disciplines	Colleges				
	A	B	C	D	E
Science	300	350	275	400	275
Commerce	250	400	325	275	250
Economics	400	450	250	300	500

What percentage of students in college B is studying in the science stream, (correct to one decimal place)?

- Ans
- 1. 29.4%
 - 2. 29.2%
 - 3. 29.6%
 - 4. 29.8%

Question ID : **98958013446**
Status : **Answered**
Chosen Option : 2

Q.25 $\Delta ABC \sim \Delta QRP$ and $PQ = 6$ cm, $QR = 8$ cm and $PR = 10$ cm. If $ar(\Delta ABC) : ar(\Delta PQR) = 1:4$, then AB is equal to:

- Ans
- 1. 2 cm
 - 2. 5 cm
 - 3. 3 cm
 - 4. 4 cm

Question ID : **98958013441**
Status : **Answered**
Chosen Option : 4

Section : English Comprehension

Q.1 Select the correctly spelt word.

- Ans
- 1. tuition
 - 2. tution
 - 3. tuetion
 - 4. tuttion

Question ID : **98958012742**
Status : **Answered**
Chosen Option : 1

Q.2 Select the most appropriate option to substitute the underlined segment in the given sentence. If no substitution is required, select No improvement.

Your coming home to dinner on time should be a rule rather the exception.

- Ans
- 1. shall be a rule rather than a exception
 - 2. No improvement
 - 3. should be a rule rather being the exception
 - 4. should be the rule rather than the exception

Question ID : 98958012724
Status : Marked For Review
Chosen Option : 1

Q.3 Select the correctly spelt word.

- Ans
- 1. previledge
 - 2. peivailege
 - 3. privilege
 - 4. previllage

Question ID : 98958012743
Status : Answered
Chosen Option : 3

Q.4 Select the most appropriate option to fill in the blank.

She got a lucrative job of a translator because she was _____ in French.

- Ans
- 1. sufficient
 - 2. efficient
 - 3. deficient
 - 4. proficient

Question ID : 98958012745
Status : Answered
Chosen Option : 4

Q.5 Select the most appropriate meaning of the underlined idiom in the given sentence.

True friends stay by our side through thick and thin.

- Ans
- 1. under all circumstances
 - 2. in happy moments
 - 3. in difficult times
 - 4. in different weathers

Question ID : 98958012738
Status : Answered
Chosen Option : 1

Q.6 Select the word which means the same as the group of words given.

One who is a great lover of books

- Ans
- 1. bibliophile
 - 2. xenophile
 - 3. hemophile
 - 4. pedophile

Question ID : 98958012741
Status : Answered
Chosen Option : 1

Q.7 Select the word which means the same as the group of words given.

A fictitious name used by an author

- Ans 1. pseudonym
 2. homonym
 3. alibi
 4. anonymous

Question ID : 98958012740
Status : Answered
Chosen Option : 1

Q.8 Select the most appropriate antonym of the given word.

ARROGANCE

- Ans 1. sweetness
 2. humility
 3. superiority
 4. vanity

Question ID : 98958012736
Status : Answered
Chosen Option : 1

Q.9 Given below are four jumbled sentences. Select the option that gives their correct order.

- A. The brain is active too during sleep, sending messages for the heart to beat regularly.
B. However, the body utilizes the sleeping time effectively.
C. We spend about one third of our time sleeping.
D. It produces energy and releases hormones for repair and growth during the night.

- Ans 1. CBDA
 2. BADC
 3. ABDC
 4. CABD

Question ID : 98958012732
Status : Marked For Review
Chosen Option : 4

Q.10 Select the most appropriate option to substitute the underlined segment in the given sentence. If no substitution is required, select No improvement.

Knowing the particular things that motivate each person help you add power to their motivation.

- Ans 1. No improvement
 2. help you to add power
 3. helps you add power
 4. help you adding power

Question ID : 98958012725
Status : Answered
Chosen Option : 2

Q.11 Select the most appropriate option to fill in the blank.

The committee reached _____ decision regarding the appointment of the chairman.

- Ans
- 1. a compatible
 - 2. a unanimous
 - 3. an exemplary
 - 4. an agreeable

Question ID : 98958012744
Status : Answered
Chosen Option : 2

Q.12 In the sentence identify the segment which contains the grammatical error.

There isn't many rice left in the house so we must replenish our stock soon.

- Ans
- 1. our stock soon
 - 2. so we must replenish
 - 3. There isn't many rice
 - 4. left in the house

Question ID : 98958012720
Status : Answered
Chosen Option : 3

Q.13 Select the most appropriate antonym of the given word.

MEAGRE

- Ans
- 1. plentiful
 - 2. inadequate
 - 3. scanty
 - 4. premium

Question ID : 98958012737
Status : Answered
Chosen Option : 1

Q.14 Select the correct active form of the given sentence.

We will all be greatly benefitted by this scheme.

- Ans
- 1. This scheme has greatly benefitted us all.
 - 2. This scheme would greatly benefit we all.
 - 3. This scheme will greatly benefit us all.
 - 4. This scheme is going to greatly benefit us all.

Question ID : 98958012723
Status : Answered
Chosen Option : 3

Q.15

In the sentence identify the segment which contains the grammatical error.

Ten kilometres are a long distance to cover on foot for a child.

- Ans
- 1. Ten kilometres are

- 2. to cover on foot
- 3. a long distance
- 4. for a child

Question ID : 98958012721
Status : Answered
Chosen Option : 1

Q.16 Select the most appropriate synonym of the given word.

PERPLEX

- Ans
- 1. surprise
 - 2. bewilder
 - 3. complex
 - 4. deceive

Question ID : 98958012735
Status : Not Attempted and Marked For Review
Chosen Option : --

Comprehension:

In the following passage some words have been deleted. Fill in the blanks with the help of the alternatives given. Select the most appropriate option for each blank.

Leaving his car with the valet, he (1)_____ the hotel and joined the large crowd milling (2)_____. He found a badge waiting for him (3)_____ the receptionist's table and took his (4)_____ in the rear of the hall. When the place was (5)_____ the moderator welcomed the crowd.

SubQuestion No : 17

Q.17 Select the most appropriate option to fill in blank No.1.

- Ans
- 1. accessed
 - 2. entered
 - 3. admitted
 - 4. invaded

Question ID : 98958012727
Status : Answered
Chosen Option : 2

Comprehension:

In the following passage some words have been deleted. Fill in the blanks with the help of the alternatives given. Select the most appropriate option for each blank.

Leaving his car with the valet, he (1)_____ the hotel and joined the large crowd milling (2)_____. He found a badge waiting for him (3)_____ the receptionist's table and took his (4)_____ in the rear of the hall. When the place was (5)_____ the moderator welcomed the crowd.

SubQuestion No : 18

Q.18 Select the most appropriate option to fill in blank No.2.

- Ans
- 1. about
 - 2. aside
 - 3. into
 - 4. out

Question ID : 98958012728
Status : Not Answered
Chosen Option : --

Comprehension:

In the following passage some words have been deleted. Fill in the blanks with the help of the alternatives given. Select the most appropriate option for each blank.

Leaving his car with the valet, he (1)_____ the hotel and joined the large crowd milling (2)_____ He found a badge waiting for him (3)_____ the receptionist's table and took his (4)_____ in the rear of the hall. When the place was (5)_____ the moderator welcomed the crowd.

SubQuestion No : 19

Q.19 Select the most appropriate option to fill in blank No.3.

- Ans 1. over
 2. at
 3. in
 4. by

Question ID : 98958012729
Status : Answered
Chosen Option : 2

Comprehension:

In the following passage some words have been deleted. Fill in the blanks with the help of the alternatives given. Select the most appropriate option for each blank.

Leaving his car with the valet, he (1)_____ the hotel and joined the large crowd milling (2)_____ He found a badge waiting for him (3)_____ the receptionist's table and took his (4)_____ in the rear of the hall. When the place was (5)_____ the moderator welcomed the crowd.

SubQuestion No : 20

Q.20 Select the most appropriate option to fill in blank No.4.

- Ans 1. stand
 2. lounge
 3. couch
 4. seat

Question ID : 98958012730
Status : Answered
Chosen Option : 4

Comprehension:

In the following passage some words have been deleted. Fill in the blanks with the help of the alternatives given. Select the most appropriate option for each blank.

Leaving his car with the valet, he (1)_____ the hotel and joined the large crowd milling (2)_____ He found a badge waiting for him (3)_____ the receptionist's table and took his (4)_____ in the rear of the hall. When the place was (5)_____ the moderator welcomed the crowd.

SubQuestion No : 21

Q.21 Select the most appropriate option to fill in blank No.5.

- Ans 1. filled
 2. completed

3. stuffed

4. empty

Question ID : 98958012731
Status : Answered
Chosen Option : 1

Q.22 Given below are four jumbled sentences. Select the option that gives their correct order.

- A. But they faced grave danger if they tried to criticize these decisions.
- B. The nationalists now began to openly criticize the policies of the British.
- C. The freedom movement changed this situation.
- D. Under colonial rule, the people had lived in fear of the British government and did not agree with many of the decisions that they took.

- Ans
- 1. CBAD
 - 2. DBAC
 - 3. BADC
 - 4. DACB

Question ID : 98958012733
Status : Answered
Chosen Option : 4

Q.23 Select the most appropriate synonym of the given word.

DEFER

- Ans
- 1. dread
 - 2. despair
 - 3. dictate
 - 4. delay

Question ID : 98958012734
Status : Answered
Chosen Option : 4

Q.24 Select the correct passive form of the given sentence.

The sailors had never encountered such a rough sea.

- Ans
- 1. Such a rough sea was never encountered by the sailors.
 - 2. Such a rough sea had never been encountered by the sailors.
 - 3. Such a rough sea has never been encountered by the sailors.
 - 4. Such a rough sea is never encountered by the sailors.

Question ID : 98958012722
Status : Answered
Chosen Option : 2

Q.25 Select the most appropriate meaning of the underlined idiom in the given sentence.

Due to increased number of lay offs in the industry, the sword of Damocles is always hanging over the employees.

- Ans
- 1. strict rules and regulations
 - 2. an ill omen of death

✓ 3. a constant threat

✗ 4. threat of physical harm

Question ID : 98958012739

Status : Answered

Chosen Option : 3

OnlineGuru