

## Combined Graduate Level Examination Tier II 2023 PAPER I

Roll Number	
Candidate Name	
Venue Name	
Exam Date	26/10/2023
Exam Time	9:00 AM - 12:00 PM
Subject	CGLE 2023 Tier II Paper I

### Section : Mathematical Abilities

**Q.1** The average of 25, 46 and 'y' is 11. What is the value of 'y'?

Ans ☒ 1. -38

☐ 2. -34

☐ 3. -36

☐ 4. -37

Question ID : 264330171105

Option 1 ID : 264330671036

Option 2 ID : 264330671038

Option 3 ID : 264330671037

Option 4 ID : 264330671035

Status : Answered

Chosen Option : 1

**Q.2** From the top of a tower, the angle of depression of the top of a 10 m high building is  $60^\circ$ .

If the distance between the tower and the building is  $50\sqrt{3}$  m, find the height of the tower.

Ans ☐ 1. 150 m

☐ 2. 100 m

☒ 3. 160 m

☐ 4. 140 m

Question ID : 264330172607

Option 1 ID : 264330676981

Option 2 ID : 264330676979

Option 3 ID : 264330676982

Option 4 ID : 264330676980

Status : Answered

Chosen Option : 3

**Q.3** A merchant fixes the sale price of his goods at 42% above the cost price. He sells his goods at a 15% discount marked price. His percentage of profit (rounded off to the nearest integer) is:

Ans ☒ 1. 21%

☐ 2. 42%

☐ 3. 35%

☐ 4. 27%

Question ID : 264330166057

Option 1 ID : 264330651304

Option 2 ID : 264330651303

Option 3 ID : 264330651306

Option 4 ID : 264330651305

Status : Answered

Chosen Option : 1

**Q.4** A set of data presented in the form of a frequency distribution table with class intervals and their respective frequencies had a mode of 48.5. The lower boundary of the modal class was 46.5; the frequency of the modal class was 34; the frequency of the class interval just preceding the modal class was 32 and the frequency of the class interval just succeeding the modal class was 25. What was the width of the modal class?

- Ans**
- ☒ 1. 12
  - ☒ 2. 10.5
  - ☒ 3. 11
  - ☒ 4. 10

Question ID : 264330171141

Option 1 ID : 264330671182

Option 2 ID : 264330671180

Option 3 ID : 264330671181

Option 4 ID : 264330671179

Status : **Answered**

Chosen Option : 3

**Q.5** An equilateral triangle ABC surmounts a square BCDE. The value of  $\angle EAB + 3\angle AEB$  is:

- Ans**
- ☒ 1.  $60^\circ$
  - ☒ 2.  $80^\circ$
  - ☒ 3.  $280^\circ$
  - ☒ 4.  $240^\circ$

Question ID : 264330173723

Option 1 ID : 264330681358

Option 2 ID : 264330681357

Option 3 ID : 264330681355

Option 4 ID : 264330681356

Status : **Not Answered**

Chosen Option : --

**Q.6** The marks obtained by 15 students out of a maximum of 25 in a test are given as 13, 11, 16, 15, 18, 12, 13, 14, 10, 22, 15, 21, 20, 17 and 24. Find the product of the modes of this set of data.

- Ans**
- ☒ 1. 192
  - ☒ 2. 210
  - ☒ 3. 182
  - ☒ 4. 195

Question ID : 264330171139

Option 1 ID : 264330671171

Option 2 ID : 264330671174

Option 3 ID : 264330671172

Option 4 ID : 264330671173

Status : **Answered**

Chosen Option : 4

Q.7 Two friends A and B started a business by investing ₹1,50,000 and ₹2,50,000, respectively. They agreed to distribute their earnings in the same ratio of their investments. After an year, the profit earned was ₹6,00,000. Each of them added ₹50,000 to their respective profits and invested in a different project. If this project gave an yield of ₹4,20,000, then A's share in the profit is:

- Ans
- ☒ 1. ₹2,35,000
  - ☒ 2. ₹1,65,000
  - ☒ 3. ₹1,97,000
  - ☒ 4. ₹1,84,000

Question ID : 264330171718

Option 1 ID : 264330673475

Option 2 ID : 264330673478

Option 3 ID : 264330673476

Option 4 ID : 264330673477

Status : Answered

Chosen Option : 2

Q.8 The ratio of the length, width and height of a closed cuboid is given as 6 : 3 : 2. The total surface area of this cuboid is given as  $1800 \text{ cm}^2$ . Find the volume (in  $\text{cm}^3$ ) of this cuboid.

- Ans
- ☒ 1. 4650
  - ☒ 2. 4800
  - ☒ 3. 4500
  - ☒ 4. 4200

Question ID : 264330171151

Option 1 ID : 264330671221

Option 2 ID : 264330671222

Option 3 ID : 264330671220

Option 4 ID : 264330671219

Status : Answered

Chosen Option : 3

Q.9 B purchased 15 kg apples at the rate of ₹180 per kg from a wholesaler who uses a weight of 950 grams for the kg weight. B sold all these apples at ₹180 per kg but used a weight of 750 grams for the kg weight. Find the percentage profit earned by B in the transaction (correct to 2 places of decimal).

- Ans
- ☒ 1. 22.55%
  - ☒ 2. 25.75%
  - ☒ 3. 33.33%
  - ☒ 4. 26.67%

Question ID : 264330171866

Option 1 ID : 264330674058

Option 2 ID : 264330674057

Option 3 ID : 264330674055

Option 4 ID : 264330674056

Status : Not Answered

Chosen Option : --

Q.10 If  $P(A \cup B) = \frac{5}{9}$ ,  $P(\bar{A} \cup \bar{B}) = \frac{13}{27}$ ,  $P(A) = \frac{11}{18}$ , then the odds against the event B are:

- Ans
- ☒ 1.  $\frac{38}{17}$
  - ☒ 2.  $\frac{7}{57}$
  - ☒ 3.  $\frac{29}{25}$
  - ☒ 4.  $\frac{47}{7}$

Question ID : 264330172352

Option 1 ID : 264330675959

Option 2 ID : 264330675961

Option 3 ID : 264330675962

Option 4 ID : 264330675960

Status : Not Answered

Chosen Option : --

Q.11 The average weight of the first thirteen persons among fourteen persons is 78 kg. The weight of the 14th person is 39 kg more than the average weight of all the fourteen persons. Find the weight of the 14th person.

- Ans
- ☒ 1. 118 kg
  - ☒ 2. 98 kg
  - ☒ 3. 110 kg
  - ☒ 4. 120 kg

Question ID : 264330164084

Option 1 ID : 264330643589

Option 2 ID : 264330643587

Option 3 ID : 264330643588

Option 4 ID : 264330643590

Status : Answered

Chosen Option : 4

Q.12 What is the single discount equivalent to the successive discounts of 20%, 35%, and 10%?

- Ans
- ☒ 1. 53.2%
  - ☒ 2. 65.4%
  - ☒ 3. 48.7%
  - ☒ 4. 42.3%

Question ID : 264330164051

Option 1 ID : 264330643457

Option 2 ID : 264330643455

Option 3 ID : 264330643456

Option 4 ID : 264330643458

Status : Answered

Chosen Option : 1

**Q.13** Three cards are drawn one after another with replacement from a pack of cards. What is the probability of getting first card a Jack, second card a black card, and third card an even numbered card?

Ans ☒ 1.  $\frac{5}{338}$

☐ 2.  $\frac{20}{338}$

☐ 3.  $\frac{25}{26}$

☐ 4.  $\frac{5}{169}$

Question ID : 264330172307

Option 1 ID : 264330675787

Option 2 ID : 264330675790

Option 3 ID : 264330675789

Option 4 ID : 264330675788

Status : Not Answered

Chosen Option : --

**Q.14** At a certain time in a park, the number of heads and the number of legs of monkeys and human visitors were counted, and it was found that there were 54 heads and 148 legs. Find the number of monkeys in the park.

Ans ☒ 1. 20

☐ 2. 16

☐ 3. 18

☐ 4. 14

Question ID : 264330164103

Option 1 ID : 264330643666

Option 2 ID : 264330643664

Option 3 ID : 264330643665

Option 4 ID : 264330643663

Status : Answered

Chosen Option : 1

**Q.15** Vipin travels one-third of the distance of a journey at a speed of 30 km/h and the remaining distance at a speed of 40 km/h. If he took a total of 12 hours to complete the journey, what was the total distance (in km) of the journey?

Ans ☒ 1. 432

☐ 2. 450

☐ 3. 445

☐ 4. 412

Question ID : 264330171869

Option 1 ID : 264330674069

Option 2 ID : 264330674067

Option 3 ID : 264330674068

Option 4 ID : 264330674070

Status : Answered

Chosen Option : 1

**Q.16** 80 litres of a mixture of spirit and water in the ratio 7 : 9 is present in a container A. 20 litres of the mixture is transferred to another container B. Then the container A is filled with 20 litres of water. Then 32 litres of the mixture is again transferred to container B. The ratio of water to spirit of the mixture in container B is equal to:

- Ans
- ☒ 1. 41 : 87
  - ☒ 2. 87 : 41
  - ☒ 3. 131 : 77
  - ☒ 4. 77 : 131

Question ID : 264330172343

Option 1 ID : 264330675924

Option 2 ID : 264330675923

Option 3 ID : 264330675926

Option 4 ID : 264330675925

Status : Not Answered

Chosen Option : --

**Q.17** A solid cube, whose each edge is of length 48 cm, is melted. Identical solid cubes, each of volume  $64 \text{ cm}^3$ , are made out of this molten cube, without any wastage. How many such small cubes are obtained?

- Ans
- ☒ 1. 1728
  - ☒ 2. 1718
  - ☒ 3. 1748
  - ☒ 4. 1738

Question ID : 264330171148

Option 1 ID : 264330671210

Option 2 ID : 264330671207

Option 3 ID : 264330671208

Option 4 ID : 264330671209

Status : Answered

Chosen Option : 1

**Q.18**

What is the value of  $\left[ \frac{1}{8} + \left\{ \frac{1}{6} \times \left( \frac{36}{45} \div \frac{24}{25} \right) - \left( \frac{12}{21} \times \frac{14}{15} \div \frac{24}{45} \right) \right\} + \frac{27}{36} \right]$  ?

- Ans
- ☒ 1.  $\frac{1}{36}$
  - ☒ 2.  $\frac{1}{72}$
  - ☒ 3.  $\frac{1}{108}$
  - ☒ 4.  $\frac{1}{27}$

Question ID : 264330172610

Option 1 ID : 264330676992

Option 2 ID : 264330676991

Option 3 ID : 264330676994

Option 4 ID : 264330676993

Status : Not Answered

Chosen Option : --

**Q.19** Two pillars of equal height stand on either side of a roadway which is 150 m wide. At a point in the road between pillars, the elevations of the pillars are  $x^\circ$  and  $y^\circ$  so that  $\tan x^\circ = \frac{2}{5}$ ,  $\tan y^\circ = \frac{3}{5}$ , then the height of each pillar is:

Ans ☒ 1. 39 m

☒ 2. 36 m

☒ 3. 42 m

☒ 4. 33 m

Question ID : 264330171729

Option 1 ID : 264330673521

Option 2 ID : 264330673519

Option 3 ID : 264330673522

Option 4 ID : 264330673520

Status : Not Answered

Chosen Option : --

**Q.20** The cost of 2 pencils and 3 pens is ₹55 and the cost of 7 pencils and 2 pens is ₹65. What is the total price (in ₹) of one pen and one pencil?

Ans ☒ 1. 15

☒ 2. 25

☒ 3. 12

☒ 4. 20

Question ID : 264330163904

Option 1 ID : 264330642869

Option 2 ID : 264330642868

Option 3 ID : 264330642870

Option 4 ID : 264330642867

Status : Answered

Chosen Option : 4

**Q.21** If  $P : Q = 3 : 4$  and  $Q : R = 4 : 7$ , then find the value of  $(P + Q) : (Q + R) : (R + P)$ .

Ans ☒ 1. 11 : 4 : 7

☒ 2. 10 : 3 : 11

☒ 3. 3 : 4 : 7

☒ 4. 7 : 11 : 10

Question ID : 264330164089

Option 1 ID : 264330643609

Option 2 ID : 264330643610

Option 3 ID : 264330643607

Option 4 ID : 264330643608

Status : Answered

Chosen Option : 4



Q.22 A six-digit number 11p9q4 is divisible by 24. Then the greatest possible value for pq is:

Ans ☒ 1. 56

☒ 2. 68

☒ 3. 42

☒ 4. 32

Question ID : 264330172341

Option 1 ID : 264330675916

Option 2 ID : 264330675918

Option 3 ID : 264330675917

Option 4 ID : 264330675915

Status : Answered

Chosen Option : 1

Q.23 The compound interest on ₹10,000 at 20% per annum is ₹4,641. If the compounding is done half-yearly, then for how many years was the sum invested?

Ans ☒ 1. 4

☒ 2. 6

☒ 3. 3

☒ 4. 2

Question ID : 264330163897

Option 1 ID : 264330642840

Option 2 ID : 264330642842

Option 3 ID : 264330642841

Option 4 ID : 264330642839

Status : Answered

Chosen Option : 4

Q.24 Hari, Kamal and Lalit contested an election in which 6050 votes were polled and none of the votes were invalid. Kamal got 42% more votes than the total votes obtained by Hari and Lalit together. If Lalit obtained only 8% of the total polled votes, find the number of votes obtained by Hari.

Ans ☒ 1. 2016

☒ 2. 1668

☒ 3. 1912

☒ 4. 1556

Question ID : 264330171864

Option 1 ID : 264330674050

Option 2 ID : 264330674048

Option 3 ID : 264330674049

Option 4 ID : 264330674047

Status : Not Answered

Chosen Option : --



Q.25 A and B can complete a job together in 12.5 days; B and C can complete the same job together in 18.75 days, while C and A can complete the same job together in 15 days. In how many days will A, B and C together be able to complete the same job alongside D, who is only 40% as efficient as C?

Ans

- ☒ 1.  $9\frac{1}{3}$   
☒ 2.  $9\frac{2}{3}$   
☒ 3.  $9\frac{7}{27}$   
☒ 4.  $9\frac{17}{27}$

Question ID : 264330171134

Option 1 ID : 264330671154

Option 2 ID : 264330671151

Option 3 ID : 264330671153

Option 4 ID : 264330671152

Status : Not Answered

Chosen Option : --

Q.26 The average age of A, B and C is 20 years. Two years ago the sum of the ages of A and B was 6 more than that of C. Find the present age of C.

Ans

- ☒ 1. 25 years  
☒ 2. 29 years  
☒ 3. 28 years  
☒ 4. 26 years

Question ID : 264330171874

Option 1 ID : 264330674087

Option 2 ID : 264330674090

Option 3 ID : 264330674089

Option 4 ID : 264330674088

Status : Answered

Chosen Option : 4

Q.27 Find the value of

$$\frac{\sqrt{1.24} \times \sqrt{2.79}}{\sqrt{2.64} \times \sqrt{5.94}}$$

Ans

- ☒ 1.  $\frac{31}{66}$   
☒ 2.  $\frac{31}{44}$   
☒ 3.  $\frac{33}{64}$   
☒ 4.  $\frac{33}{31}$

Question ID : 264330172972

Option 1 ID : 264330678401

Option 2 ID : 264330678400

Option 3 ID : 264330678402

Option 4 ID : 264330678399

Status : Answered

Chosen Option : 1

Q.28

If  $A = \frac{58^2 - 25^2}{46^2 - 37^2}$ ,  $B = \frac{26^2 - 15^2}{56^2 - 15^2}$ , then the value of  $\frac{1}{B} - \frac{20}{A}$  is:

- Ans
- ☒ 1. 2
  - ☒ 2. 1
  - ☒ 3. -1
  - ☒ 4. 0

Question ID : 264330171945

Option 1 ID : 264330674362

Option 2 ID : 264330674361

Option 3 ID : 264330674359

Option 4 ID : 264330674360

Status : Not Answered

Chosen Option : --

Q.29 The simple interest earned on ₹2,800 at a rate of 10% per annum for 3 years is ₹x and ₹1,736 is the simple interest earned on ₹6,200 at a rate of 14% for y years, then the value of x/y is:

- Ans
- ☒ 1. 140
  - ☒ 2. 380
  - ☒ 3. 550
  - ☒ 4. 420

Question ID : 264330171719

Option 1 ID : 264330673480

Option 2 ID : 264330673482

Option 3 ID : 264330673479

Option 4 ID : 264330673481

Status : Answered

Chosen Option : 4

Q.30 One chord of a circle is given as 20.5 cm. Then the radius (r) of the circle must be:

- Ans
- ☒ 1.  $r = 10\text{cm}$
  - ☒ 2.  $r < 10.25$
  - ☒ 3.  $r > 10.25$
  - ☒ 4.  $r \geq 10.25$

Question ID : 264330172602

Option 1 ID : 264330676961

Option 2 ID : 264330676959

Option 3 ID : 264330676960

Option 4 ID : 264330676962

Status : Not Answered

Chosen Option : --

**Q.1** A statement is followed by four conclusions. Which of the conclusions is/are true based on the given statement?

**Statement:**

$I < M < F \leq D \leq S = J$

**Conclusions:**

I)  $S < M$

II)  $F = S$

III)  $I > J$

IV)  $M < D$

**Ans** ✓ 1. Only conclusion IV is true.

✗ 2. Conclusions I and III are true.

✗ 3. Only conclusion II is true.

✗ 4. Conclusions IV and II are true.

Question ID : 264330171840

Option 1 ID : 264330673951

Option 2 ID : 264330673954

Option 3 ID : 264330673952

Option 4 ID : 264330673953

Status : Answered

Chosen Option : 1

**Q.2** Given below is a statement followed by two possible reasons numbered I and II. Read the statement carefully and decide which of the two explain(s) the event/observation/information given in the statement.

**statement:**

In India, large cities have attracted migrant population from across rural parts of the country. According to 2011 census, in India's six largest metros (Delhi, Mumbai, Chennai, Bengaluru, Kolkata and Hyderabad), approximately 48% of the residents were migrants.

**reasons:**

I) Migration happens due to availability of better career and economic prospects in cities.

II) Migration happens because people like travelling and exploring new cities.

**Ans** ✓ 1. Only I is a possible reason.

✗ 2. Neither I nor II is a possible reason.

✗ 3. Both I and II are possible reasons.

✗ 4. Only II is a possible reason.

Question ID : 264330163769

Option 1 ID : 264330642327

Option 2 ID : 264330642329

Option 3 ID : 264330642330

Option 4 ID : 264330642328

Status : Answered

Chosen Option : 1

**Q.3** What should come in place of the question mark (?) in the given series?  
18, 74, 298, 1194, 4778, ?

**Ans** ✗ 1. 19116

✗ 2. 19112

✓ 3. 19114

✗ 4. 19110

Question ID : 264330171936

Option 1 ID : 264330674330

Option 2 ID : 264330674328

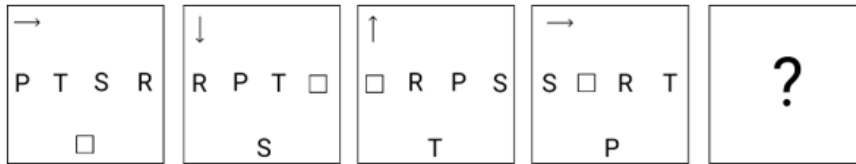
Option 3 ID : 264330674329

Option 4 ID : 264330674327

Status : Answered

Chosen Option : 3

Q.4 Identify the figure given in the options which when put in place of (?) will logically complete the series.



Ans

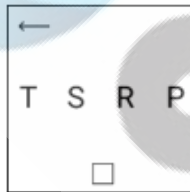
✓ 1.



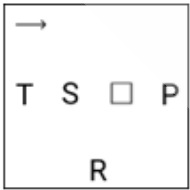
✗ 2.



✗ 3.



✗ 4.



Question ID : 264330162980

Option 1 ID : 264330639235

Option 2 ID : 264330639237

Option 3 ID : 264330639236

Option 4 ID : 264330639238

Status : Not Answered

Chosen Option : --

Q.5 What approximate value will come in place of the question mark (?) in the following equation?

$$49.85 - 5.31 + 9.97 = ?$$

Ans ✗ 1. 19

✗ 2. 37

✗ 3. 6

✓ 4. 55

Question ID : 264330170892

Option 1 ID : 264330670196

Option 2 ID : 264330670197

Option 3 ID : 264330670195

Option 4 ID : 264330670198

Status : Answered

Chosen Option : 4

Q.6 Select the set in which the numbers are related in the same way as are the numbers of the following sets.

(NOTE: Operations should be performed on the whole numbers, without breaking down the numbers into its constituent digits. E.g., 13 – Operations on 13 such as adding /subtracting /multiplying etc. to 13 can be performed. Breaking down 13 into 1 and 3 and then performing mathematical operations on 1 and 3 is not allowed.)

(5, 5, 25)

(2, 5, 10)

Ans ☒ 1. (3, 3, 9)

☐ 2. (4, 4, 20)

☐ 3. (7, 3, 14)

☐ 4. (9, 3, 26)

Question ID : 264330170859

Option 1 ID : 264330670063

Option 2 ID : 264330670064

Option 3 ID : 264330670065

Option 4 ID : 264330670066

Status : Answered

Chosen Option : 1

Q.7 Select the correct option that indicates the arrangement of the given words in a logical and meaningful order.

1. Shirt piece

2.Thread

3. Fabric

4. Shirt

5. Cotton

Ans ☒ 1. 5, 2, 3, 1, 4

☐ 2. 3, 5, 1, 2, 4

☐ 3. 5, 3, 1, 2, 4

☐ 4. 3, 1, 2, 4, 5

Question ID : 264330166334

Option 1 ID : 264330652396

Option 2 ID : 264330652395

Option 3 ID : 264330652398

Option 4 ID : 264330652397

Status : Answered

Chosen Option : 1

Q.8 Select the combination of letters that when sequentially placed in the blanks of the given series will complete the series.

A \_DF GI \_L MOP \_\_UVX YA \_D

Ans ☐ 1. BJQRB

☒ 2. CJRSB

☐ 3. BJRSB

☐ 4. CJQRB

Question ID : 264330163998

Option 1 ID : 264330643243

Option 2 ID : 264330643244

Option 3 ID : 264330643246

Option 4 ID : 264330643245

Status : Answered

Chosen Option : 2

Q.9 Each of the digits in the number 7148356 is arranged in ascending order from left to right. The position of how many digits will remain unchanged as compared to that in the original number?

- Ans ☒ 1. None  
☒ 2. One  
☒ 3. Two  
☒ 4. Three

Question ID : 264330170901  
Option 1 ID : 264330670231  
Option 2 ID : 264330670232  
Option 3 ID : 264330670233  
Option 4 ID : 264330670234  
Status : Answered  
Chosen Option : 2

Q.10 What will come in the place of the question mark (?) in the following equation if '+' and '-' are interchanged and 'x' and '÷' are interchanged?  
 $163 \div 3 + 147 \times 7 - 1 = ?$

- Ans ☒ 1. 489  
☒ 2. 459  
☒ 3. 479  
☒ 4. 469

Question ID : 264330170917  
Option 1 ID : 264330670298  
Option 2 ID : 264330670295  
Option 3 ID : 264330670297  
Option 4 ID : 264330670296  
Status : Answered  
Chosen Option : 4

Q.11 A certain number of people are sitting in a row, facing north. N is sitting third to the left of P. M is sitting third to the left of N. O is sitting third to the left of M. M is sitting between O and N. N is sitting between M and P. If no other person is sitting in the row, what is the total number of persons seated?

- Ans ☒ 1. 9  
☒ 2. 10  
☒ 3. 8  
☒ 4. 11

Question ID : 264330171855  
Option 1 ID : 264330674012  
Option 2 ID : 264330674011  
Option 3 ID : 264330674013  
Option 4 ID : 264330674014  
Status : Answered  
Chosen Option : 2

**Q.12** Three of the following word pairs are alike in some manner and hence form a group. Which word pair does not belong to that group?  
(The words must be considered as meaningful English words and must not be grouped based on the number of letters/number of consonants/vowels in the word.)

- Ans ☒ 1. Travel : Tour  
☒ 2. Close : Distant  
☒ 3. Look : See  
☒ 4. Carry : Lift

Question ID : 264330171845  
Option 1 ID : 264330673973  
Option 2 ID : 264330673972  
Option 3 ID : 264330673974  
Option 4 ID : 264330673971  
Status : Answered  
Chosen Option : 2

**Q.13** What will come in the place of the question mark (?) in the following equation if '+' and '-' are interchanged and 'x' and '÷' are interchanged?  
 $113 \div 4 - 217 \times 7 + 4 = ?$

- Ans ☒ 1. 467  
☒ 2. 459  
☒ 3. 477  
☒ 4. 479

Question ID : 264330170921  
Option 1 ID : 264330670312  
Option 2 ID : 264330670311  
Option 3 ID : 264330670313  
Option 4 ID : 264330670314  
Status : Answered  
Chosen Option : 4

**Q.14** A question is given, followed by two statements labelled I and II. Identify which of the statements is/are sufficient to answer the question.

Question:

A, B, C, D, E and F are sitting around a circular table. Each of them faces either the centre of the table or outside (i.e., opposite to the centre). In which direction is D facing?

Statements:

(I) B sits second to the right of F and both are facing the centre. Only two people are sitting between A and E from the either sides. Both A and E are facing the same direction. A is not an immediate neighbor of B.

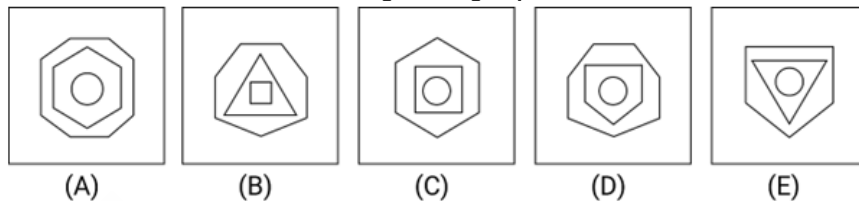
(II) C is facing the opposite direction of B. D is sitting to the second left of C.

- Ans ☒ 1. Statement I alone is sufficient to answer the question while statement II is not.  
☒ 2. Statements I and II together are not sufficient to answer the question.  
☒ 3. Statement II alone is sufficient to answer the question while statement I is not.  
☒ 4. Statements I and II together are sufficient to answer the question.

Question ID : 264330173697  
Option 1 ID : 264330681255  
Option 2 ID : 264330681258  
Option 3 ID : 264330681256  
Option 4 ID : 264330681257  
Status : Marked For Review  
Chosen Option : 2



**Q.15** Four of the following five figures are alike in a certain way and thus form a group. Which is the one that does NOT belong to that group?



Ans ☒ 1. C  
☒ 2. D  
☒ 3. B  
☒ 4. A

Question ID : 264330162869  
 Option 1 ID : 264330638793  
 Option 2 ID : 264330638794  
 Option 3 ID : 264330638792  
 Option 4 ID : 264330638791  
 Status : Answered  
 Chosen Option : 3

**Q.16** One statement is given, and it is followed by two inferences numbered I and II. Read the statement and decide which of the inferences is/are true for the given statement.  
**Statements:** Fuel prices in India are inflating day by day, and there is no upper limit in its price increase.  
**Inferences:**  
 I. Central and State governments have not cut down their respective taxes on fuel.  
 II. Inflation in the international market is influencing the rising fuel prices.

Ans ☒ 1. Both inferences I and II are true.  
☒ 2. Only inference II is true.  
☒ 3. Neither inference I nor II is true.  
☒ 4. Only inference I is true.

Question ID : 264330171862  
 Option 1 ID : 264330674042  
 Option 2 ID : 264330674040  
 Option 3 ID : 264330674041  
 Option 4 ID : 264330674039  
 Status : Marked For Review  
 Chosen Option : 1

**Q.17** In this question, a question is followed by two statements numbered (I) and (II). You have to decide whether the data provided in the statements are sufficient to answer the question. Read both the statements and decide the appropriate answer.  
**Question:** How is Kishore related to Sujata?  
 (I) Navya is the daughter of Kishore. Vinita is the wife of Kishore.  
 (II) Aman is the brother of Navya. Sujata is the only daughter of Aman.

Ans ☒ 1. (II) alone is sufficient while (I) alone is not sufficient.  
☒ 2. (I) alone is sufficient while (II) alone is not sufficient.  
☒ 3. Both (I) and (II) together are needed.  
☒ 4. Either (I) alone or (II) alone is sufficient.

Question ID : 264330173707  
 Option 1 ID : 264330681296  
 Option 2 ID : 264330681295  
 Option 3 ID : 264330681298  
 Option 4 ID : 264330681297  
 Status : Answered  
 Chosen Option : 3

**Q.18** Select the option that is related to the third word in the same way as the second word is related to the first word.

(The words must be considered as meaningful English words and must not be related to each other based on the number of letters/number of consonants/vowels in the word.)

Crowd : Dense :: Slope : ?

- Ans
- ☒ 1. Plain
  - ☒ 2. Tight
  - ☒ 3. Fill
  - ☒ 4. Steep

Question ID : 264330171853

Option 1 ID : 264330674004

Option 2 ID : 264330674003

Option 3 ID : 264330674006

Option 4 ID : 264330674005

Status : Marked For Review

Chosen Option : 4

**Q.19** What will come in the place of the question mark (?) in the following equation if '+' and '-' are interchanged and 'x' and '÷' are interchanged?

$$161 \div 4 + 75 \times 5 - 4 = ?$$

- Ans
- ☒ 1. 533
  - ☒ 2. 633
  - ☒ 3. 643
  - ☒ 4. 543

Question ID : 264330170916

Option 1 ID : 264330670294

Option 2 ID : 264330670291

Option 3 ID : 264330670292

Option 4 ID : 264330670293

Status : Answered

Chosen Option : 2

**Q.20** Q is the mother of R. P is the husband of Q. S is the brother of R. How is P related to S?

- Ans
- ☒ 1. Father
  - ☒ 2. Brother
  - ☒ 3. Son
  - ☒ 4. Wife's brother

Question ID : 264330172006

Option 1 ID : 264330674599

Option 2 ID : 264330674600

Option 3 ID : 264330674601

Option 4 ID : 264330674602

Status : Answered

Chosen Option : 1

**Q.21** Seven people, A, B, C, D, E, F and G are sitting in a straight line, facing north. Only three people sit to the left of D. Only two people sit between D and A. B sits fifth to the right of C. G sits to the immediate right of E but somewhere to the left of A. Who sits to the extreme right?

- Ans
- ☒ 1. B
  - ☒ 2. A
  - ☒ 3. E
  - ☒ 4. G

Question ID : 264330172003

Option 1 ID : 264330674587

Option 2 ID : 264330674590

Option 3 ID : 264330674588

Option 4 ID : 264330674589

Status : Answered

Chosen Option : 2

**Q.22** Select the combination of letters that when sequentially placed in the blanks of the given series will make it logically complete.

P R \_ Y \_ \_ R A \_ Z P \_ A \_ Z

- Ans
- ☒ 1. AZYZRY
  - ☒ 2. APYZZY
  - ☒ 3. AZPYRY
  - ☒ 4. APYZRY

Question ID : 264330166307

Option 1 ID : 264330652290

Option 2 ID : 264330652289

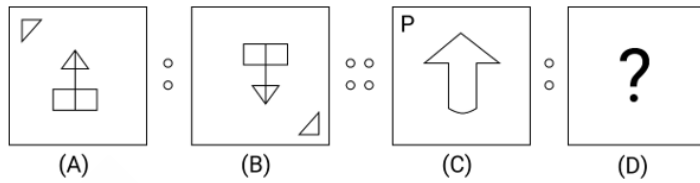
Option 3 ID : 264330652287

Option 4 ID : 264330652288

Status : Answered

Chosen Option : 3

**Q.23** Figure A is related to B in a certain pattern. Following the same pattern, figure C is related to D. Study the pattern and select the figure which should be placed in place of D.



Ans

1. P
2. q
3. d
4. d

Question ID : 264330172907

Option 1 ID : 264330678153

Option 2 ID : 264330678152

Option 3 ID : 264330678154

Option 4 ID : 264330678151

Status : Answered

Chosen Option : 3

**Q.24** How many meaningful English words can be formed with the second, fourth, fifth, and sixth letters of the word HOCKEY (when counted from left to right) using each letter only once in each word?

Ans 1. Three

2. Two

3. Zero

4. One

Question ID : 264330171997

Option 1 ID : 264330674566

Option 2 ID : 264330674565

Option 3 ID : 264330674563

Option 4 ID : 264330674564

Status : Not Answered

Chosen Option : --

**Q.25** Three of the following four number-pairs are alike in a certain way and thus form a group. Which is the pair that does not belong to that group?  
(NOTE : Operations should be performed on the whole numbers, without breaking down the numbers into its constituent digits. E.g. 13 – Operations on 13 such as adding /subtracting /multiplying etc. to 13 can be performed. Breaking down 13 into 1 and 3 and then performing mathematical operations on 1 and 3 is not allowed.)

- Ans ☒ 1. 13-117  
☒ 2. 11-89  
☒ 3. 18-162  
☒ 4. 15-135

Question ID : 264330170879  
Option 1 ID : 264330670144  
Option 2 ID : 264330670143  
Option 3 ID : 264330670146  
Option 4 ID : 264330670145  
Status : Answered  
Chosen Option : 2

**Q.26** In a certain code language, 'BUTTER' is coded as 'CWWSCO' and 'THEORY' is coded as 'UJHNPV'. How will 'LATENT' be coded in that language?

- Ans ☒ 1. MDXCLQ  
☒ 2. MCWDLQ  
☒ 3. MEVCKR  
☒ 4. MCWDMP

Question ID : 264330171860  
Option 1 ID : 264330674034  
Option 2 ID : 264330674031  
Option 3 ID : 264330674032  
Option 4 ID : 264330674033  
Status : Answered  
Chosen Option : 2

**Q.27** Read the given statements and conclusions carefully. You have to take the given statements to be true even if they seem to be at variance from commonly known facts. You have to decide which conclusions logically follow(s) from the given statements.

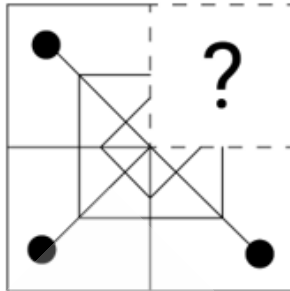
**Statements:**  
Some pens are books.  
All book are cars.  
Some cars are spoons.

**Conclusions:**  
(I) : Some spoons are pens.  
(II) : Some books are pens.

- Ans ☒ 1. Only conclusion (I) follows  
☒ 2. Only conclusion (II) follows  
☒ 3. Both conclusions (I) and (II) follow  
☒ 4. Neither conclusion (I) nor (II) follows

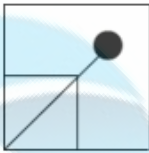
Question ID : 264330166327  
Option 1 ID : 264330652367  
Option 2 ID : 264330652368  
Option 3 ID : 264330652370  
Option 4 ID : 264330652369  
Status : Answered  
Chosen Option : 2

Q.28 Select the option figure that will replace the question mark (?) in the figure given below to complete the pattern.

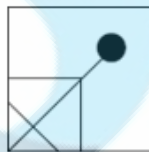


Ans

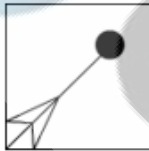
✗ 1.



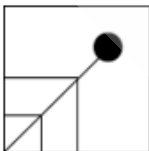
✓ 2.



✗ 3.



✗ 4.



Question ID : 264330162946

Option 1 ID : 264330639099

Option 2 ID : 264330639101

Option 3 ID : 264330639102

Option 4 ID : 264330639100

Status : Answered

Chosen Option : 2

Q.29 In a certain code language, 'CARD' is coded as '7359', 'SERV' is coded as '1256' and 'PACK' is coded as '8497'. What is the code for 'D' in the given code language?

Ans ✗ 1. 9

✗ 2. 5

✗ 3. 7

✓ 4. 3

Question ID : 264330167811

Option 1 ID : 264330658196

Option 2 ID : 264330658198

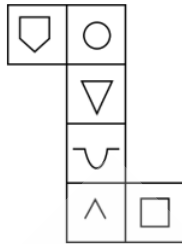
Option 3 ID : 264330658197

Option 4 ID : 264330658195

Status : Answered

Chosen Option : 4

**Q.30** When the below given diagram is folded in the shape of a cube which symbol will face opposite to '^'?



**Ans**

- ☒ 1. 
- ☒ 2. 
- ☒ 3. 
- ☒ 4. 

Question ID : 264330172905

Option 1 ID : 264330678144

Option 2 ID : 264330678143

Option 3 ID : 264330678145

Option 4 ID : 264330678146

Status : Answered

Chosen Option : 3

Section : English Language and Comprehension

**Q.1** Parts of the following sentence have been given as options. Select the option that contains an error.

This is the book whom I wanted to buy.

**Ans**

- ☒ 1. the book
- ☒ 2. wanted to buy.
- ☒ 3. whom I
- ☒ 4. This is

Question ID : 264330166080

Option 1 ID : 264330651396

Option 2 ID : 264330651398

Option 3 ID : 264330651397

Option 4 ID : 264330651395

Status : Answered

Chosen Option : 3



**Q.2** Parts of the following sentence have been given as options. Select the option that contains an error.

Everyone should respect those parents, teachers, and elders.

- Ans
- ☒ 1. and elders.
  - ☒ 2. parents, teachers,
  - ☒ 3. respect those
  - ☒ 4. Everyone should

Question ID : 264330163984

Option 1 ID : 264330643190

Option 2 ID : 264330643189

Option 3 ID : 264330643188

Option 4 ID : 264330643187

Status : Answered

Chosen Option : 3

**Q.3** The following sentence has been divided into four parts. One of them contains an error. Select the part that contains the error from the given options. .

They were / married happily / before she / quit her job.

A B C D

- Ans
- ☒ 1. B
  - ☒ 2. D
  - ☒ 3. C
  - ☒ 4. A

Question ID : 264330162634

Option 1 ID : 264330637866

Option 2 ID : 264330637865

Option 3 ID : 264330637863

Option 4 ID : 264330637864

Status : Answered

Chosen Option : 4

**Q.4** Parts of the following sentence have been given as options. Select the option that contains an error.

The speaker's emphasiss is on the present-day problems that are being faced by ordinary men of India.

- Ans
- ☒ 1. that are being faced
  - ☒ 2. on the present-day problems
  - ☒ 3. by ordinary men of India
  - ☒ 4. The speaker's emphasiss is

Question ID : 264330170949

Option 1 ID : 264330670425

Option 2 ID : 264330670424

Option 3 ID : 264330670426

Option 4 ID : 264330670423

Status : Answered

Chosen Option : 1

Q.5 The given sentence has an error which has been underlined. The underlined word is given as options with some changes. Select the option that rectifies the error.  
She vaccillates a lot while making any decision.

- Ans
- ☒ 1. vasillates
  - ☒ 2. vacillattes
  - ☒ 3. vacillates
  - ☒ 4. vacilates

Question ID : 264330170950  
Option 1 ID : 264330670427  
Option 2 ID : 264330670428  
Option 3 ID : 264330670430  
Option 4 ID : 264330670429  
Status : Answered  
Chosen Option : 3

Q.6 Select the most appropriate option to fill in the blank.

By this time tomorrow, I \_\_\_\_\_ the work assigned to me.

- Ans
- ☒ 1. will have did
  - ☒ 2. will do
  - ☒ 3. will have done
  - ☒ 4. will be done

Question ID : 264330166088  
Option 1 ID : 264330651428  
Option 2 ID : 264330651430  
Option 3 ID : 264330651427  
Option 4 ID : 264330651429  
Status : Answered  
Chosen Option : 3

Q.7 Select the most appropriate phrasal verb to fill in the blank. .

\_\_\_\_\_ that thought. It will be a great idea someday.

- Ans
- ☒ 1. Hold onto
  - ☒ 2. Hold to
  - ☒ 3. Hold on
  - ☒ 4. Hold against

Question ID : 264330162645  
Option 1 ID : 264330637907  
Option 2 ID : 264330637909  
Option 3 ID : 264330637908  
Option 4 ID : 264330637910  
Status : Answered  
Chosen Option : 1

**Q.8** Select the option that expresses the given sentence in indirect speech.  
He said, "Two and two make four."

- Ans ☒ 1. He says that two and two made four.  
☒ 2. He said that two and two make four.  
☒ 3. He says that two and two make four.  
☒ 4. He said that two and two made four.

Question ID : 264330167397

Option 1 ID : 264330656574

Option 2 ID : 264330656571

Option 3 ID : 264330656572

Option 4 ID : 264330656573

Status : Answered

Chosen Option : 2

**Q.9** Select the option that expresses the given sentence in active voice.

The award was presented to her by the director.

- Ans ☒ 1. She presented the award to the director.  
☒ 2. The award presented to her by the director.  
☒ 3. The director presented the award to her.  
☒ 4. She was presenting the award to the director.

Question ID : 264330167316

Option 1 ID : 264330656259

Option 2 ID : 264330656262

Option 3 ID : 264330656261

Option 4 ID : 264330656260

Status : Answered

Chosen Option : 3

**Q.10** Read the given sentence carefully and fill in the blank by selecting the correct synonym of the word given in the brackets.  
The authority refused to pay any heed to the \_\_\_\_\_ demands made by the workers. (Trivial)

- Ans ☒ 1. conceited  
☒ 2. idiotic  
☒ 3. insignificant  
☒ 4. majestic

Question ID : 264330171641

Option 1 ID : 264330673175

Option 2 ID : 264330673176

Option 3 ID : 264330673177

Option 4 ID : 264330673178

Status : Answered

Chosen Option : 3

**Q.11** Select the option that can be used as a one-word substitute for the underlined part of the given sentence.

There is a place for grains in the backyard of this house.

- Ans
- ☐ 1. apiary
  - ☐ 2. archive
  - ☒ 3. granary
  - ☐ 4. dormitory

Question ID : 264330170339  
Option 1 ID : 264330668016  
Option 2 ID : 264330668018  
Option 3 ID : 264330668015  
Option 4 ID : 264330668017  
Status : Answered  
Chosen Option : 3

**Q.12** Select the option that expresses the following sentence in active voice.

By whom were you taught English grammar and composition?

- Ans
- ☐ 1. Who has taught you English grammar and composition?
  - ☐ 2. Whom taught you English grammar and composition?
  - ☐ 3. Who had taught you English grammar and composition?
  - ☒ 4. Who taught you English grammar and composition?

Question ID : 264330164766  
Option 1 ID : 264330646203  
Option 2 ID : 264330646205  
Option 3 ID : 264330646204  
Option 4 ID : 264330646206  
Status : Answered  
Chosen Option : 4

**Q.13** Select the most appropriate option in direct speech.

- Ans
- ☒ 1. The principal said to me, "You are in-charge of the admission cell."
  - ☐ 2. The principal say me, "You are in-charge of the admission cell."
  - ☐ 3. The principal said to I, "You are in-charge of the admission cell."
  - ☐ 4. The principal said me, You are in-charge of the admission cell.

Question ID : 264330171902  
Option 1 ID : 264330674199  
Option 2 ID : 264330674200  
Option 3 ID : 264330674201  
Option 4 ID : 264330674202  
Status : Answered  
Chosen Option : 1

**Q.14** Select the sentence which gives the most appropriate meaning of the given idiom.

**Bite the bullet**

- Ans** ☒ 1. The children played in the park on a sunny day.  
☒ 2. Despite the pain, Sarah decided to go ahead with the surgery.  
☒ 3. The chef prepared a delicious meal for the guests.  
☒ 4. Jack and Jill went up the hill to fetch a pail of water.

Question ID : 264330167830

Option 1 ID : 264330658274

Option 2 ID : 264330658271

Option 3 ID : 264330658272

Option 4 ID : 264330658273

Status : **Answered**

Chosen Option : 2

**Q.15** Select the option that arranges the given words to form a grammatically correct and meaningful sentence.

The students eagerly their awaited results.

- Ans** ☒ 1. The students their eagerly awaited results.  
☒ 2. The awaited eagerly results their students.  
☒ 3. Eagerly awaited the students their results.  
☒ 4. The students eagerly awaited their results.

Question ID : 264330166269

Option 1 ID : 264330652145

Option 2 ID : 264330652143

Option 3 ID : 264330652146

Option 4 ID : 264330652144

Status : **Answered**

Chosen Option : 4

**Q.16** Select the most appropriate option to fill in the blank.

Robin watched as the smoke \_\_\_\_\_ steadily from the chimney.

- Ans** ☒ 1. hung  
☒ 2. rose  
☒ 3. left  
☒ 4. went

Question ID : 264330171636

Option 1 ID : 264330673156

Option 2 ID : 264330673155

Option 3 ID : 264330673158

Option 4 ID : 264330673157

Status : **Answered**

Chosen Option : 2

**Q.17** Select the most appropriate option in the superlative degree that can substitute the underlined segment in the given sentence.

This is the challenge task I have ever encountered.

- Ans ☒ 1. more challenging  
☒ 2. most challenging  
☒ 3. challenging  
☒ 4. much challenging

Question ID : 264330162611  
Option 1 ID : 264330637771  
Option 2 ID : 264330637773  
Option 3 ID : 264330637774  
Option 4 ID : 264330637772  
Status : Answered  
Chosen Option : 2

**Q.18** The following sentence has been divided into parts. One of them may contain an error. Select the part that contains the error from the given options. If you don't find any error, mark 'No error' as your answer.  
They want to live in first floor of this building.

- Ans ☒ 1. They want to  
☒ 2. of this building  
☒ 3. No error  
☒ 4. live in first floor

Question ID : 264330172317  
Option 1 ID : 264330675823  
Option 2 ID : 264330675825  
Option 3 ID : 264330675826  
Option 4 ID : 264330675824  
Status : Answered  
Chosen Option : 3

**Q.19** Select the option that can be used as a one-word substitute for the underlined phrase in the following sentence.  
She was known for her ability to communicate effectively and express herself clearly in writing and speaking.

- Ans ☒ 1. incoherence  
☒ 2. articulation  
☒ 3. mumbling  
☒ 4. rambling

Question ID : 264330166261  
Option 1 ID : 264330652113  
Option 2 ID : 264330652111  
Option 3 ID : 264330652114  
Option 4 ID : 264330652112  
Status : Answered  
Chosen Option : 2

**Q.20** Select the option that expresses the given sentence in indirect speech.  
He said, "I bought this book for my brother."

- Ans ☒ 1. He said that he buy this book for his brother.  
☒ 2. He said that he had bought that book for his brother.  
☒ 3. He said that he has bought this book for his brother.  
☒ 4. He said that he bought this book for his brother.

Question ID : 264330167400

Option 1 ID : 264330656586

Option 2 ID : 264330656585

Option 3 ID : 264330656584

Option 4 ID : 264330656583

Status : Answered

Chosen Option : 2

**Q.21** Select the option that expresses the given sentence in passive voice.

Access denied.

- Ans ☒ 1. Let the access be denied.  
☒ 2. Let it be known that access will be denied.  
☒ 3. Access has been denied.  
☒ 4. Access is being denied.

Question ID : 264330164417

Option 1 ID : 264330644875

Option 2 ID : 264330644878

Option 3 ID : 264330644876

Option 4 ID : 264330644877

Status : Not Answered

Chosen Option : --

**Q.22** The following sentence has been split into four segments. Identify the segment that contains a grammatical error.

We / has seen / that movie / before.

- Ans ☒ 1. has seen  
☒ 2. before  
☒ 3. that movie  
☒ 4. We

Question ID : 264330162608

Option 1 ID : 264330637760

Option 2 ID : 264330637762

Option 3 ID : 264330637761

Option 4 ID : 264330637759

Status : Answered

Chosen Option : 1



**Q.23** Select the option that rectifies the underlined part of the given sentence. In case no correction is needed, select 'No correction required'.  
Ashoka was not only a great warrior but also a very wiser ruler.

- Ans
- ☒ 1. more wise
  - ☒ 2. No correction required
  - ☒ 3. wisest
  - ☒ 4. wise

Question ID : 264330164752  
Option 1 ID : 264330646148  
Option 2 ID : 264330646150  
Option 3 ID : 264330646149  
Option 4 ID : 264330646147  
Status : Answered  
Chosen Option : 4

**Q.24** The given sentence has an error. Choose the option that corrects the error  
Throw a rounder stone to create ripples in the water.

- Ans
- ☒ 1. Throw the roundest stone to create ripples in the water.
  - ☒ 2. Throw a more round stone to create ripples in the water.
  - ☒ 3. Throw a more rounder stone to create ripples in the water.
  - ☒ 4. Throw a round stone to create ripples in the water.

Question ID : 264330162641  
Option 1 ID : 264330637894  
Option 2 ID : 264330637892  
Option 3 ID : 264330637891  
Option 4 ID : 264330637893  
Status : Answered  
Chosen Option : 4

**Q.25** Select the option that rectifies the underlined part of the given sentence. In case no correction is needed, select 'No correction required'.  
Cinema provides the most universal entertainment.

- Ans
- ☒ 1. No correction required
  - ☒ 2. a universal
  - ☒ 3. an universal
  - ☒ 4. more universal

Question ID : 264330164754  
Option 1 ID : 264330646158  
Option 2 ID : 264330646156  
Option 3 ID : 264330646157  
Option 4 ID : 264330646155  
Status : Answered  
Chosen Option : 2

Q.26 Select the option that will improve the underlined part of the following sentence.

He is taller and most handsome than his friend.

- Ans
- ☒ 1. very more
  - ☒ 2. more
  - ☒ 3. the more
  - ☒ 4. the most

Question ID : 264330166085  
Option 1 ID : 264330651418  
Option 2 ID : 264330651416  
Option 3 ID : 264330651417  
Option 4 ID : 264330651415  
Status : Answered  
Chosen Option : 2

Q.27 Select the most appropriate option to fill in the blank.  
The girl was \_\_\_\_\_ as she was drenched in the rain.

- Ans
- ☒ 1. bolt
  - ☒ 2. gold
  - ☒ 3. cold
  - ☒ 4. tight

Question ID : 264330170940  
Option 1 ID : 264330670389  
Option 2 ID : 264330670388  
Option 3 ID : 264330670387  
Option 4 ID : 264330670390  
Status : Answered  
Chosen Option : 3

Q.28 Select the most appropriate option to fill in the blank.  
You use an \_\_\_\_\_ to steer a boat.

- Ans
- ☒ 1. are
  - ☒ 2. or
  - ☒ 3. oar
  - ☒ 4. ore

Question ID : 264330162588  
Option 1 ID : 264330637682  
Option 2 ID : 264330637681  
Option 3 ID : 264330637680  
Option 4 ID : 264330637679  
Status : Answered  
Chosen Option : 3

**Q.29** Select the most appropriate idiom to fill in the blank.  
Despite their differences, the two politicians decided to \_\_\_\_\_ and work together for the greater good.

- Ans    ☒ 1. bury the hatchet  
         ☐ 2. burn the midnight oil  
         ☐ 3. bark up the wrong tree  
         ☐ 4. blow off steam

Question ID : 264330163591  
Option 1 ID : 264330641618  
Option 2 ID : 264330641615  
Option 3 ID : 264330641617  
Option 4 ID : 264330641616  
Status : Answered  
Chosen Option : 1

**Comprehension:**

In the following passage, some words have been deleted. Read the passage carefully and select the most appropriate option to fill in each blank.

The ongoing fight for social justice and equality continues to be a significant global 1. \_\_\_\_\_. Movements advocating for racial, gender and LGBTQ+ equality, as well as addressing systemic discrimination and injustice, have 2. \_\_\_\_\_ momentum in recent years. People are increasingly recognising the importance of dismantling structures that 3. \_\_\_\_\_ inequality and fostering inclusivity in all aspects of society. Calls for justice, representation and equal opportunities have sparked conversations and initiatives aimed at creating a more equitable world. It is crucial to 4. \_\_\_\_\_ in meaningful dialogue, challenge biases and actively promote diversity and to build a society where everyone has equal rights and opportunities.

**SubQuestion No : 30**

**Q.30** Select the most appropriate option to fill in blank no. 1.

- Ans    ☐ 1. drift  
         ☒ 2. focus  
         ☐ 3. divergence  
         ☐ 4. dispersion

Question ID : 264330171951  
Option 1 ID : 264330674381  
Option 2 ID : 264330674380  
Option 3 ID : 264330674379  
Option 4 ID : 264330674382  
Status : Answered  
Chosen Option : 2

**Comprehension:**

In the following passage, some words have been deleted. Read the passage carefully and select the most appropriate option to fill in each blank.

The ongoing fight for social justice and equality continues to be a significant global 1. \_\_\_\_\_. Movements advocating for racial, gender and LGBTQ+ equality, as well as addressing systemic discrimination and injustice, have 2. \_\_\_\_\_ momentum in recent years. People are increasingly recognising the importance of dismantling structures that 3. \_\_\_\_\_ inequality and fostering inclusivity in all aspects of society. Calls for justice, representation and equal opportunities have sparked conversations and initiatives aimed at creating a more equitable world. It is crucial to 4. \_\_\_\_\_ in meaningful dialogue, challenge biases and actively promote diversity and to build a society where everyone has equal rights and opportunities.

**SubQuestion No : 31**

**Q.31** Select the most appropriate option to fill in blank no. 2.

- Ans ☒ 1. invoked  
☒ 2. scattered  
☒ 3. provided  
☒ 4. gained

Question ID : 264330171952

Option 1 ID : 264330674383

Option 2 ID : 264330674384

Option 3 ID : 264330674385

Option 4 ID : 264330674386

Status : Answered

Chosen Option : 4

**Comprehension:**

In the following passage, some words have been deleted. Read the passage carefully and select the most appropriate option to fill in each blank.

The ongoing fight for social justice and equality continues to be a significant global 1. \_\_\_\_\_. Movements advocating for racial, gender and LGBTQ+ equality, as well as addressing systemic discrimination and injustice, have 2. \_\_\_\_\_ momentum in recent years. People are increasingly recognising the importance of dismantling structures that 3. \_\_\_\_\_ inequality and fostering inclusivity in all aspects of society. Calls for justice, representation and equal opportunities have sparked conversations and initiatives aimed at creating a more equitable world. It is crucial to 4. \_\_\_\_\_ in meaningful dialogue, challenge biases and actively promote diversity and to build a society where everyone has equal rights and opportunities.

**SubQuestion No : 32**

**Q.32** Select the most appropriate option to fill in blank no. 3.

- Ans ☒ 1. cease  
☒ 2. perpetuate  
☒ 3. refract  
☒ 4. terminate

Question ID : 264330171953

Option 1 ID : 264330674388

Option 2 ID : 264330674389

Option 3 ID : 264330674390

Option 4 ID : 264330674387

Status : Answered

Chosen Option : 2

**Comprehension:**

In the following passage, some words have been deleted. Read the passage carefully and select the most appropriate option to fill in each blank.

The ongoing fight for social justice and equality continues to be a significant global 1. \_\_\_\_\_. Movements advocating for racial, gender and LGBTQ+ equality, as well as addressing systemic discrimination and injustice, have 2. \_\_\_\_\_ momentum in recent years. People are increasingly recognising the importance of dismantling structures that 3. \_\_\_\_\_ inequality and fostering inclusivity in all aspects of society. Calls for justice, representation and equal opportunities have sparked conversations and initiatives aimed at creating a more equitable world. It is crucial to 4. \_\_\_\_\_ in meaningful dialogue, challenge biases and actively promote diversity and to build a society where everyone has equal rights and opportunities.

**SubQuestion No : 33**

**Q.33** Select the most appropriate option to fill in blank no. 4.

- Ans ☒ 1. engage  
☐ 2. coincide  
☐ 3. evolve  
☐ 4. manifest

Question ID : 264330171954

Option 1 ID : 264330674393

Option 2 ID : 264330674392

Option 3 ID : 264330674391

Option 4 ID : 264330674394

Status : Answered

Chosen Option : 1

**Comprehension:**

Read the given passage and answer the question that follows.

Steel is tough, and it can easily be shaped, cut or made into wire. Special alloys of steel can be made by adding small amounts of other metals such as aluminium, nickel and copper. Alloys give steel unusual hardness, toughness or ability to resist rust. Steel is often called the backbone of modern industry. Almost everything we use is either made of iron or steel or has been made with tools and machinery of these metals. Ships, trains, trucks and autos are made largely of steel. Even the safety pins and the needles you use are made from steel. Oil wells are drilled with steel machinery. Steel pipelines transport oil. Minerals are mined with steel equipment. Farm machines are mostly steel. Large buildings have steel framework.

**SubQuestion No : 34**

**Q.34** Identify the structure of the passage.

- Ans ☐ 1. Cause and effect  
☐ 2. Sequential  
☐ 3. Classification  
☒ 4. Descriptive

Question ID : 264330168513

Option 1 ID : 264330660876

Option 2 ID : 264330660875

Option 3 ID : 264330660877

Option 4 ID : 264330660878

Status : Answered

Chosen Option : 4

**Comprehension:**

Read the given passage and answer the question that follows.

Steel is tough, and it can easily be shaped, cut or made into wire. Special alloys of steel can be made by adding small amounts of other metals such as aluminium, nickel and copper. Alloys give steel unusual hardness, toughness or ability to resist rust. Steel is often called the backbone of modern industry. Almost everything we use is either made of iron or steel or has been made with tools and machinery of these metals. Ships, trains, trucks and autos are made largely of steel. Even the safety pins and the needles you use are made from steel. Oil wells are drilled with steel machinery. Steel pipelines transport oil. Minerals are mined with steel equipment. Farm machines are mostly steel. Large buildings have steel framework.

**SubQuestion No : 35**

**Q.35** Why is steel often called the backbone of modern industry?

- Ans**
- ☒ 1. Steel is used in almost every tool and machinery.
  - ☐ 2. Steel can be added with any material.
  - ☐ 3. It is easy to make steel alloys.
  - ☐ 4. Steel is tough.

Question ID : 264330168514

Option 1 ID : 264330660881

Option 2 ID : 264330660880

Option 3 ID : 264330660882

Option 4 ID : 264330660879

Status : Answered

Chosen Option : 1

**Comprehension:**

Read the given passage and answer the question that follows.

Steel is tough, and it can easily be shaped, cut or made into wire. Special alloys of steel can be made by adding small amounts of other metals such as aluminium, nickel and copper. Alloys give steel unusual hardness, toughness or ability to resist rust. Steel is often called the backbone of modern industry. Almost everything we use is either made of iron or steel or has been made with tools and machinery of these metals. Ships, trains, trucks and autos are made largely of steel. Even the safety pins and the needles you use are made from steel. Oil wells are drilled with steel machinery. Steel pipelines transport oil. Minerals are mined with steel equipment. Farm machines are mostly steel. Large buildings have steel framework.

**SubQuestion No : 36**

**Q.36** What is the tone of the passage?

- Ans**
- ☐ 1. Critical
  - ☒ 2. Informative
  - ☐ 3. Judgemental
  - ☐ 4. Ironical

Question ID : 264330168515

Option 1 ID : 264330660886

Option 2 ID : 264330660885

Option 3 ID : 264330660884

Option 4 ID : 264330660883

Status : Answered

Chosen Option : 3



**Comprehension:**

Read the given passage and answer the question that follows.

Steel is tough, and it can easily be shaped, cut or made into wire. Special alloys of steel can be made by adding small amounts of other metals such as aluminium, nickel and copper. Alloys give steel unusual hardness, toughness or ability to resist rust. Steel is often called the backbone of modern industry. Almost everything we use is either made of iron or steel or has been made with tools and machinery of these metals. Ships, trains, trucks and autos are made largely of steel. Even the safety pins and the needles you use are made from steel. Oil wells are drilled with steel machinery. Steel pipelines transport oil. Minerals are mined with steel equipment. Farm machines are mostly steel. Large buildings have steel framework.

**SubQuestion No : 37**

**Q.37** Select an appropriate title for the passage from the given options.

- Ans**    ✓ 1. Steel Industry  
         ✗ 2. Mineral ores  
         ✗ 3. Manufacturing  
         ✗ 4. Resources of Steel

Question ID : 264330168512

Option 1 ID : 264330660871

Option 2 ID : 264330660873

Option 3 ID : 264330660872

Option 4 ID : 264330660874

Status : Answered

Chosen Option : 1

**Comprehension:**

Read the given passage carefully and answer the question that follows.

The discovery of a new bird species has sparked excitement among ornithologists and bird enthusiasts worldwide. The bird, named the Sapphire-winged Warbler, discovered in a remote tropical island's rainforests, is a unique bird with vibrant blue feathers and a distinctive melodic song. Birdwatchers and nature enthusiasts have been flocking to the island in hopes of catching a glimpse of this elusive and captivating creature. The discovery of the Sapphire-winged Warbler highlights the importance of preserving and protecting habitats. Amidst the excitement surrounding the discovery of the Sapphire-winged Warbler, researchers have embarked on a mission to uncover the bird's migratory patterns. Equipped with satellite tracking devices, they aim to trace the remarkable journey of this species across vast distances. By unravelling its migratory routes and stopover locations, scientists hope to gain insight into the challenges the Sapphire-winged Warbler faces during its arduous travels. The local community on the tropical island has embraced the newfound avian resident with great enthusiasm. Efforts are underway to raise awareness about the importance of conservation and to create protected areas that ensure the continued existence of this exquisite species.

**SubQuestion No : 38**

**Q.38** Select the most appropriate title for the given passage.

- Ans**    ✓ 1. The Migratory Journey of the Sapphire-winged Warbler  
         ✗ 2. Conservation Efforts in Tropical Rainforests  
         ✗ 3. The Unique Features of the Sapphire-winged Warbler  
         ✗ 4. The Curious Behaviour of Birds in Remote Islands

Question ID : 264330171941

Option 1 ID : 264330674343

Option 2 ID : 264330674344

Option 3 ID : 264330674345

Option 4 ID : 264330674346

Status : Answered

Chosen Option : 3



### Comprehension:

Read the given passage carefully and answer the question that follows.

The discovery of a new bird species has sparked excitement among ornithologists and bird enthusiasts worldwide. The bird, named the Sapphire-winged Warbler, discovered in a remote tropical island's rainforests, is a unique bird with vibrant blue feathers and a distinctive melodic song. Birdwatchers and nature enthusiasts have been flocking to the island in hopes of catching a glimpse of this elusive and captivating creature. The discovery of the Sapphire-winged Warbler highlights the importance of preserving and protecting habitats. Amidst the excitement surrounding the discovery of the Sapphire-winged Warbler, researchers have embarked on a mission to uncover the bird's migratory patterns. Equipped with satellite tracking devices, they aim to trace the remarkable journey of this species across vast distances. By unravelling its migratory routes and stopover locations, scientists hope to gain insight into the challenges the Sapphire-winged Warbler faces during its arduous travels. The local community on the tropical island has embraced the newfound avian resident with great enthusiasm. Efforts are underway to raise awareness about the importance of conservation and to create protected areas that ensure the continued existence of this exquisite species.

#### SubQuestion No : 39

**Q.39** Which statement best reflects a fact mentioned in the given passage?

- Ans ☒ 1. The Sapphire-winged Warbler is the largest bird species in the avian kingdom.
- ☒ 2. Schools on the island organise annual bird-watching competitions.
- ☒ 3. The Sapphire-winged Warbler is the only bird species on the tropical island.
- ☒ 4. Researchers are using satellite tracking devices to study the bird's migratory patterns.

Question ID : 264330171942

Option 1 ID : 264330674350

Option 2 ID : 264330674348

Option 3 ID : 264330674347

Option 4 ID : 264330674349

Status : Answered

Chosen Option : 4

### Comprehension:

Read the given passage carefully and answer the question that follows.

The discovery of a new bird species has sparked excitement among ornithologists and bird enthusiasts worldwide. The bird, named the Sapphire-winged Warbler, discovered in a remote tropical island's rainforests, is a unique bird with vibrant blue feathers and a distinctive melodic song. Birdwatchers and nature enthusiasts have been flocking to the island in hopes of catching a glimpse of this elusive and captivating creature. The discovery of the Sapphire-winged Warbler highlights the importance of preserving and protecting habitats. Amidst the excitement surrounding the discovery of the Sapphire-winged Warbler, researchers have embarked on a mission to uncover the bird's migratory patterns. Equipped with satellite tracking devices, they aim to trace the remarkable journey of this species across vast distances. By unravelling its migratory routes and stopover locations, scientists hope to gain insight into the challenges the Sapphire-winged Warbler faces during its arduous travels. The local community on the tropical island has embraced the newfound avian resident with great enthusiasm. Efforts are underway to raise awareness about the importance of conservation and to create protected areas that ensure the continued existence of this exquisite species.

#### SubQuestion No : 40

**Q.40** Identify the most appropriate ANTONYM of the word 'stare' from the passage.

- Ans ☒ 1. Arduousness
- ☒ 2. Vibrancy
- ☒ 3. Excitement
- ☒ 4. Glimpse

Question ID : 264330171944

Option 1 ID : 264330674355

Option 2 ID : 264330674356

Option 3 ID : 264330674357

Option 4 ID : 264330674358

Status : Answered

Chosen Option : 4

**Comprehension:**

Read the given passage carefully and answer the question that follows.

The discovery of a new bird species has sparked excitement among ornithologists and bird enthusiasts worldwide. The bird, named the Sapphire-winged Warbler, discovered in a remote tropical island's rainforests, is a unique bird with vibrant blue feathers and a distinctive melodic song. Birdwatchers and nature enthusiasts have been flocking to the island in hopes of catching a glimpse of this elusive and captivating creature. The discovery of the Sapphire-winged Warbler highlights the importance of preserving and protecting habitats. Amidst the excitement surrounding the discovery of the Sapphire-winged Warbler, researchers have embarked on a mission to uncover the bird's migratory patterns. Equipped with satellite tracking devices, they aim to trace the remarkable journey of this species across vast distances. By unravelling its migratory routes and stopover locations, scientists hope to gain insight into the challenges the Sapphire-winged Warbler faces during its arduous travels. The local community on the tropical island has embraced the newfound avian resident with great enthusiasm. Efforts are underway to raise awareness about the importance of conservation and to create protected areas that ensure the continued existence of this exquisite species.

**SubQuestion No : 41**

**Q.41** Based on the given passage, which of the following inferences can be made?

- Ans ☒ 1. The discovery of the Sapphire-winged Warbler has sparked global interest in birdwatching.
- ☐ 2. The Sapphire-winged Warbler is an aggressive and territorial bird species.
- ☐ 3. Conservation efforts are solely focused on protecting the Sapphire-winged Warbler.
- ☐ 4. The scientific community has lost interest in studying avian species.

Question ID : 264330171943

Option 1 ID : 264330674354

Option 2 ID : 264330674351

Option 3 ID : 264330674352

Option 4 ID : 264330674353

Status : Answered

Chosen Option : 1

**Comprehension:**

Read the given passage and answer the question that follows.

On woody plants known as vines, luscious, smooth-skinned berries called grapes grow in dense clusters. In particular, grapes are grown in France, Italy, Spain, Australia, Chile, Romania, Georgia, South Africa and California, all of which have warm summers and moderate winters. Table grapes are larger and sweeter grapes that are intended for fresh consumption. To create wine, 80% of the grapes are crushed. The fermentation process turns grapes into wine. To make raisins, grapes must also be dried. Grapes ripen in the area of California in August. They are cut from the vines and left on trays to dry for two to three weeks. So, to transform them into raisins, they are further cooked and steeped in particular treatments. According to studies, one acre of grapes can make roughly 15,000 glasses of wine on average. Grapes of the Thompson, Flame, Ruby, Perlette and Tokay varieties are popular.

**SubQuestion No : 42**

**Q.42** What does the fermentation process do?

- Ans ☐ 1. Turns grapes into raisins
- ☐ 2. Makes grapes larger
- ☐ 3. Crushes the grapes
- ☒ 4. Turns grapes into wine

Question ID : 264330168528

Option 1 ID : 264330660928

Option 2 ID : 264330660930

Option 3 ID : 264330660929

Option 4 ID : 264330660927

Status : Answered

Chosen Option : 4

**Comprehension:**

Read the given passage and answer the question that follows.

On woody plants known as vines, luscious, smooth-skinned berries called grapes grow in dense clusters. In particular, grapes are grown in France, Italy, Spain, Australia, Chile, Romania, Georgia, South Africa and California, all of which have warm summers and moderate winters. Table grapes are larger and sweeter grapes that are intended for fresh consumption. To create wine, 80% of the grapes are crushed. The fermentation process turns grapes into wine. To make raisins, grapes must also be dried. Grapes ripen in the area of California in August. They are cut from the vines and left on trays to dry for two to three weeks. So, to transform them into raisins, they are further cooked and steeped in particular treatments. According to studies, one acre of grapes can make roughly 15,000 glasses of wine on average. Grapes of the Thompson, Flame, Ruby, Perlette and Tokay varieties are popular.

SubQuestion No : 43

Q.43 Based on your reading of the passage, select the most appropriate word which best describes 'luscious'.

- Ans
- ☒ 1. Smooth
  - ☒ 2. Soft
  - ☒ 3. Juicy
  - ☒ 4. Large

Question ID : 264330168530

Option 1 ID : 264330660935

Option 2 ID : 264330660936

Option 3 ID : 264330660938

Option 4 ID : 264330660937

Status : Answered

Chosen Option : 3

**Comprehension:**

Read the given passage and answer the question that follows.

On woody plants known as vines, luscious, smooth-skinned berries called grapes grow in dense clusters. In particular, grapes are grown in France, Italy, Spain, Australia, Chile, Romania, Georgia, South Africa and California, all of which have warm summers and moderate winters. Table grapes are larger and sweeter grapes that are intended for fresh consumption. To create wine, 80% of the grapes are crushed. The fermentation process turns grapes into wine. To make raisins, grapes must also be dried. Grapes ripen in the area of California in August. They are cut from the vines and left on trays to dry for two to three weeks. So, to transform them into raisins, they are further cooked and steeped in particular treatments. According to studies, one acre of grapes can make roughly 15,000 glasses of wine on average. Grapes of the Thompson, Flame, Ruby, Perlette and Tokay varieties are popular.

SubQuestion No : 44

Q.44 In which region do grapes ripen in August?

- Ans
- ☒ 1. Chile
  - ☒ 2. California
  - ☒ 3. France
  - ☒ 4. Australia

Question ID : 264330168527

Option 1 ID : 264330660924

Option 2 ID : 264330660925

Option 3 ID : 264330660926

Option 4 ID : 264330660923

Status : Answered

Chosen Option : 2

**Comprehension:**

Read the given passage and answer the question that follows.

On woody plants known as vines, luscious, smooth-skinned berries called grapes grow in dense clusters. In particular, grapes are grown in France, Italy, Spain, Australia, Chile, Romania, Georgia, South Africa and California, all of which have warm summers and moderate winters. Table grapes are larger and sweeter grapes that are intended for fresh consumption. To create wine, 80% of the grapes are crushed. The fermentation process turns grapes into wine. To make raisins, grapes must also be dried. Grapes ripen in the area of California in August. They are cut from the vines and left on trays to dry for two to three weeks. So, to transform them into raisins, they are further cooked and steeped in particular treatments. According to studies, one acre of grapes can make roughly 15,000 glasses of wine on average. Grapes of the Thompson, Flame, Ruby, Perlette and Tokay varieties are popular.

**SubQuestion No : 45**

**Q.45** Select the most appropriate title for the passage.

- Ans**
- ☒ 1. Grapes and its uses
  - ☐ 2. Grapes and world
  - ☐ 3. Wine making
  - ☐ 4. Varieties of grapes

Question ID : 264330168529

Option 1 ID : 264330660933

Option 2 ID : 264330660934

Option 3 ID : 264330660931

Option 4 ID : 264330660932

Status : Answered

Chosen Option : 3

Section : General Awareness

**Q.1** Who was the second vice-President of India?

- Ans**
- ☐ 1. VV Giri
  - ☐ 2. Krishna Kant
  - ☒ 3. Dr Zakir Hussain
  - ☐ 4. Dr S Radhakrishnan

Question ID : 264330171901

Option 1 ID : 264330674196

Option 2 ID : 264330674198

Option 3 ID : 264330674197

Option 4 ID : 264330674195

Status : Answered

Chosen Option : 3

Q.2 Match the following

Characteristics/Other Name	Name of River
----------------------------	---------------

- |                               |                |
|-------------------------------|----------------|
| A. Area of Badland topography | 1. Godavari    |
| B. Vridh Ganga                | 2. Brahmaputra |
| C. Tsangpo                    | 3. Kosi        |
| D. Sorrow of Bihar            | 4. Chambal     |

- Ans
- ☒ 1. A-4, B-1, C-3, D-2
  - ☒ 2. A-1, B-4, C-2, D-3
  - ☒ 3. A-4, B-2, C-1, D-3
  - ☒ 4. A-4, B-1, C-2, D-3

Question ID : 264330172292  
Option 1 ID : 264330675729  
Option 2 ID : 264330675728  
Option 3 ID : 264330675730  
Option 4 ID : 264330675727  
Status : Answered  
Chosen Option : 4

Q.3 Which of the following options represents the total income earned by individuals from all the sources before deduction of personal income taxes?

- Ans
- ☒ 1. Disposable income
  - ☒ 2. Personal income
  - ☒ 3. Gross income
  - ☒ 4. National income

Question ID : 264330172912  
Option 1 ID : 264330678172  
Option 2 ID : 264330678173  
Option 3 ID : 264330678174  
Option 4 ID : 264330678171  
Status : Answered  
Chosen Option : 3

Q.4 Match List-I with List-II.

List-I (Chemical compound)	List-II (Spices)
A. Curcuminoids	1. Cardamom
B. 1,8-cineole	2. Black pepper
C. Eugenol	3. Turmeric
D. Piperine	4. Cloves

Ans

- ☒ 1. A B C D  
4 3 2 1
- ☒ 2. A B C D  
3 1 4 2
- ☒ 3. A B C D  
3 1 2 4
- ☒ 4. A B C D  
1 4 3 2

Question ID : 264330172047

Option 1 ID : 264330674765

Option 2 ID : 264330674763

Option 3 ID : 264330674766

Option 4 ID : 264330674764

Status : Answered

Chosen Option : 2

Q.5 According to which of the following foreign travellers did Dhruvasena II attend Harsha's assembly at Prayag (Allahabad)?

- Ans ☒ 1. Marco Polo
- ☒ 2. Hiuen Tsang
- ☒ 3. Fa-Hien
- ☒ 4. Itsing

Question ID : 264330171274

Option 1 ID : 264330671714

Option 2 ID : 264330671711

Option 3 ID : 264330671713

Option 4 ID : 264330671712

Status : Not Answered

Chosen Option : --

Q.6 The Constitution (Scheduled Tribes) Order (Fourth Amendment) Bill, 2022 was passed in Rajya Sabha in December 2022. It seeks to amend the Constitution (Scheduled Tribes) Order, 1950, with respect to its application to the State of \_\_\_\_\_.

- Ans ☒ 1. Karnataka
- ☒ 2. Rajasthan
- ☒ 3. Goa
- ☒ 4. Manipur

Question ID : 264330171912

Option 1 ID : 264330674238

Option 2 ID : 264330674235

Option 3 ID : 264330674236

Option 4 ID : 264330674237

Status : Not Answered

Chosen Option : --



Q.7 Match the following subject matters with their concerned Articles.

a

b

1. Superintendence, direction and control of elections to be vested in an Election commission
2. Power of parliament to make provision with respect to election to legislature
3. Bar of interference by courts in electoral matters

A) Article 329

B) Article 324

C) Article 327

Ans ☒ 1. 1-C, 2-B, 3-A

☒ 2. 1-A, 2-C, 3-B

☒ 3. 1-A, 2-B, 3-C

☒ 4. 1-B, 2-C, 3-A

Question ID : 264330173727

Option 1 ID : 264330681373

Option 2 ID : 264330681374

Option 3 ID : 264330681372

Option 4 ID : 264330681371

Status : Answered

Chosen Option : 4

Q.8 Match the positions in List I with the states in List II, related to the 36<sup>th</sup> National Games 2022, and select the correct answer from the codes below.

List I (Positions)

List II (States)

A I position in medal tally

(i) Maharashtra

B II position in medal tally

(ii) Haryana

C III position in medal tally

(iii) Karnataka

D IV position in medal tally

(iv) Services sports control board

Ans ☒ 1. A-i, B-iii, C-ii, D-iv

☒ 2. A-iv, B-i, C-ii, D-iii

☒ 3. A-i, B-ii, C-iii, D-iv

☒ 4. A-ii, B-i, C-iii, D-iv

Question ID : 264330172335

Option 1 ID : 264330675893

Option 2 ID : 264330675892

Option 3 ID : 264330675894

Option 4 ID : 264330675891

Status : Answered

Chosen Option : 2



**Q.9 Which of the following are some regions in the world, known for their thriving citrus fruit production?**

- Ans**
- ☐ 1. Africa
  - ☐ 2. Equatorial regions
  - ☐ 3. Caribbean
  - ☒ 4. Mediterranean regions

Question ID : 264330167795

Option 1 ID : 264330658134

Option 2 ID : 264330658131

Option 3 ID : 264330658133

Option 4 ID : 264330658132

Status : Answered

Chosen Option : 4

**Q.10 Based on current scientific knowledge, it is currently postulated that the Earth has an estimated age of:**

- Ans**
- ☒ 1. about 4,50,00,00,000 years
  - ☐ 2. about 95,00,00, 00 years
  - ☐ 3. about 45,00,000 years
  - ☐ 4. about 65,00,000 years

Question ID : 264330167796

Option 1 ID : 264330658136

Option 2 ID : 264330658138

Option 3 ID : 264330658135

Option 4 ID : 264330658137

Status : Answered

Chosen Option : 1

**Q.11 What kind of energy is associated with falling coconuts, speeding cars, rolling stones and flying aircraft?**

- Ans**
- ☐ 1. Potential energy
  - ☒ 2. Kinetic Energy
  - ☐ 3. Radiant energy
  - ☐ 4. Elastic energy

Question ID : 264330172096

Option 1 ID : 264330674962

Option 2 ID : 264330674961

Option 3 ID : 264330674960

Option 4 ID : 264330674959

Status : Answered

Chosen Option : 2

Q.12 Match the following details regarding Phase-I of Bharatmala Project.

Scheme		Targeted Length (in km)
A.	Economic corridors	1. 9000
B.	Border and international connectivity roads	2. 2000
C.	Expressways	3. 800
D.	Inter-corridors and feeder roads	4. 6000

- Ans ☒ 1. A-1, B-3, C-2, D-4  
☒ 2. A-4, B-2, C-3, D-1  
☒ 3. A-1, B-2, C-3, D-4  
☒ 4. A-1, B-2, C-4, D-3

Question ID : 264330171993

Option 1 ID : 264330674547

Option 2 ID : 264330674548

Option 3 ID : 264330674550

Option 4 ID : 264330674549

Status : Answered

Chosen Option : 1

Q.13 In September 2022, the Government of \_\_\_\_\_ decided to launch a campaign aimed at women's safety titled 'Hamar Beti Hamar Maan' (our daughter, our honour). Its focus will be creating awareness on safety measures among school- and college-going girls and prioritising registration and investigation of women-related crimes.

- Ans ☒ 1. Bihar  
☒ 2. Madhya Pradesh  
☒ 3. Jharkhand  
☒ 4. Chhattisgarh

Question ID : 264330171921

Option 1 ID : 264330674271

Option 2 ID : 264330674272

Option 3 ID : 264330674274

Option 4 ID : 264330674273

Status : Answered

Chosen Option : 4

Q.14 According to Census of India 2011, in which of the following states was the gap in the literacy rates of males and females, highest?

- Ans ☒ 1. Meghalaya  
☒ 2. Mizoram  
☒ 3. Rajasthan  
☒ 4. Kerala

Question ID : 264330172294

Option 1 ID : 264330675735

Option 2 ID : 264330675737

Option 3 ID : 264330675738

Option 4 ID : 264330675736

Status : Answered

Chosen Option : 3

**Q.15** Match the following Prime Ministers of India with the Five-Year Plans they initiated.

List-1 (Prime Ministers)

i : Jawaharlal Nehru

ii: Manmohan Singh

iii: Atal Bihari Vajpayee

List-2 (Five-Year Plans)

a) Second Five-Year Plan

b) Tenth Five-Year Plan

c) Eleventh Five-Year Plan

Ans ☒ 1. i-b, ii-c, iii-a

☒ 2. i-c, ii-b, iii-a

☒ 3. i-b, ii-a, iii-c

☒ 4. i-a, ii-c, iii-b

Question ID : 264330172916

Option 1 ID : 264330678190

Option 2 ID : 264330678189

Option 3 ID : 264330678188

Option 4 ID : 264330678187

Status : Answered

Chosen Option : 4

**Q.16** Which Committee had suggested a penalty or punishment for the non-performance of Fundamental Duties?

Ans ☒ 1. Indira Gandhi Committee

☒ 2. Morarji Desai Committee

☒ 3. Verma Committee

☒ 4. Swaran Singh Committee

Question ID : 264330171898

Option 1 ID : 264330674185

Option 2 ID : 264330674186

Option 3 ID : 264330674184

Option 4 ID : 264330674183

Status : Not Answered

Chosen Option : --

**Q.17** Among the choices listed, which one is NOT a form of cancer?

Ans ☒ 1. Glaucoma

☒ 2. Carcinoma

☒ 3. Lymphoma

☒ 4. Sarcoma

Question ID : 264330166349

Option 1 ID : 264330652458

Option 2 ID : 264330652456

Option 3 ID : 264330652455

Option 4 ID : 264330652457

Status : Answered

Chosen Option : 1

Q.18 In September 2022, the \_\_\_\_\_ Assembly sets aside one day for women MLAs to speak about women issues such as safety, health, hygiene and education .

- Ans
- ☒ 1. Rajasthan
  - ☒ 2. Punjab
  - ☒ 3. Uttar Pradesh
  - ☒ 4. Madhya Pradesh

Question ID : 264330171923

Option 1 ID : 264330674280

Option 2 ID : 264330674281

Option 3 ID : 264330674282

Option 4 ID : 264330674279

Status : Not Answered

Chosen Option : --

Q.19 Who among the following has written the 'Badshah Nama'?

- Ans
- ☒ 1. Babur
  - ☒ 2. Abdul Hamid Lahori
  - ☒ 3. Inayat Khan
  - ☒ 4. Abul Fazl

Question ID : 264330171290

Option 1 ID : 264330671777

Option 2 ID : 264330671776

Option 3 ID : 264330671778

Option 4 ID : 264330671775

Status : Not Answered

Chosen Option : --

Q.20 What will be the average kinetic energy per molecule in SI units for an ideal gas at a temperature of 25°C?

- Ans
- ☒ 1.  $9.17 \times 10^{-22}$  J
  - ☒ 2.  $6.17 \times 10^{-21}$  J
  - ☒ 3.  $7.17 \times 10^{-20}$  J
  - ☒ 4.  $8.17 \times 10^{-22}$  J

Question ID : 264330171742

Option 1 ID : 264330673574

Option 2 ID : 264330673571

Option 3 ID : 264330673572

Option 4 ID : 264330673573

Status : Not Answered

Chosen Option : --

Q.21 Which of the following is a possible criticism of privatisation?

- Ans
- ☒ 1. Expansion of bureaucracy and efficiency in public enterprises
  - ☒ 2. Excessive government interference into private businesses
  - ☒ 3. Limited access to essential services for marginalised populations
  - ☒ 4. Reduced competition and innovation in the market

Question ID : 264330172915

Option 1 ID : 264330678186

Option 2 ID : 264330678185

Option 3 ID : 264330678183

Option 4 ID : 264330678184

Status : Answered

Chosen Option : 3

Q.22 What are the elements in group zero commonly known as?

- Ans ☒ 1. Reactive  
☒ 2. Inert gases  
☒ 3. Radioactive  
☒ 4. Volatile

Question ID : 264330163737

Option 1 ID : 264330642200

Option 2 ID : 264330642202

Option 3 ID : 264330642201

Option 4 ID : 264330642199

Status : Answered

Chosen Option : 2

Q.23 Match List-I with List-II.

List-I	(Acid)	List-II	(Food Source)
A.	Carbonic acid	1.	Mustard oil
B.	Lauric acid	2.	Butter
C.	Butyric acid	3.	Soda Water
D.	Erucic acid	4.	Coconut milk

- Ans ☒ 1. A B C D  
1 4 2 3  
☒ 2. A B C D  
3 4 2 1  
☒ 3. A B C D  
2 3 1 4  
☒ 4. A B C D  
4 2 3 1

Question ID : 264330172046

Option 1 ID : 264330674762

Option 2 ID : 264330674760

Option 3 ID : 264330674761

Option 4 ID : 264330674759

Status : Answered

Chosen Option : 2

**Q.24** Identify the INCORRECTLY matched pair(s) of the British Governor-Generals of India and the events with which they are associated.

- i) Lord Dalhousie – Revolt of 1857
- ii) Lord Auckland – First Afghan War
- iii) Lord Canning – Wood’s Despatch 1854

- Ans**
- ☒ 1. Only (ii) and (iii)
  - ☒ 2. Only (ii)
  - ☒ 3. Only (i) and (iii)
  - ☒ 4. Only (i)

Question ID : 264330171925

Option 1 ID : 264330674290

Option 2 ID : 264330674288

Option 3 ID : 264330674289

Option 4 ID : 264330674287

Status : Not Answered

Chosen Option : --

**Q.25** Among the following diseases, which one is NOT inherited?

- Ans**
- ☒ 1. Down syndrome
  - ☒ 2. Cystic fibrosis
  - ☒ 3. Malaria
  - ☒ 4. Muscular dystrophy

Question ID : 264330166353

Option 1 ID : 264330652474

Option 2 ID : 264330652471

Option 3 ID : 264330652473

Option 4 ID : 264330652472

Status : Answered

Chosen Option : 3

Section : Computer Knowledge Module

**Q.1** A/An \_\_\_\_\_ is an organisation that connects its subscriber’s computer using modem to the Internet.

- Ans**
- ☒ 1. Uniform Resource Locator
  - ☒ 2. Web Browser
  - ☒ 3. Web Server
  - ☒ 4. Internet Service Provider

Question ID : 264330183365

Option 1 ID : 264330719183

Option 2 ID : 264330719182

Option 3 ID : 264330719181

Option 4 ID : 264330719180

Status : Answered

Chosen Option : 4

Q.2 Which of the following is an example of GUI-based user agent in email?

- Ans
- ☐ 1. Elm
  - ☐ 2. Mail
  - ☐ 3. Pine
  - ☒ 4. Netscape

Question ID : 264330183359

Option 1 ID : 264330719158

Option 2 ID : 264330719159

Option 3 ID : 264330719157

Option 4 ID : 264330719156

Status : Not Answered

Chosen Option : --

Q.3 In MS Office 365, the Page Setup dialog box can be found under which of the following tabs?

- Ans
- ☐ 1. Home
  - ☐ 2. Draw
  - ☒ 3. Layout
  - ☐ 4. Insert

Question ID : 264330183362

Option 1 ID : 264330719168

Option 2 ID : 264330719171

Option 3 ID : 264330719169

Option 4 ID : 264330719170

Status : Answered

Chosen Option : 3

Q.4 When the sender and receiver of an email are on the same system, we need only \_\_\_\_\_ user agents.

- Ans
- ☒ 1. two
  - ☐ 2. three
  - ☐ 3. four
  - ☐ 4. six

Question ID : 264330183363

Option 1 ID : 264330719172

Option 2 ID : 264330719173

Option 3 ID : 264330719174

Option 4 ID : 264330719175

Status : Answered

Chosen Option : 1



**Q.5** In File Explorer of Windows 11, which of the following tabs includes the 'hidden items' option?

- Ans**
- ☐ 1. Home
  - ☐ 2. File
  - ☒ 3. View
  - ☐ 4. Share

Question ID : 264330183357

Option 1 ID : 264330719148

Option 2 ID : 264330719149

Option 3 ID : 264330719151

Option 4 ID : 264330719150

Status : **Answered**

Chosen Option : 3

**Q.6** What is the primary purpose of RAM (Random Access Memory) in a computer?

- Ans**
- ☐ 1. Storing permanent data and files
  - ☐ 2. Providing long-term storage for programs
  - ☒ 3. Providing temporary storage for data that the CPU is currently processing
  - ☐ 4. Managing peripheral devices

Question ID : 264330183348

Option 1 ID : 264330719112

Option 2 ID : 264330719114

Option 3 ID : 264330719115

Option 4 ID : 264330719113

Status : **Answered**

Chosen Option : 3

**Q.7** What is a cell in Microsoft Excel?

- Ans**
- ☐ 1. A separate file used to store data.
  - ☐ 2. A single worksheet within a workbook.
  - ☒ 3. The intersection of a row and a column in a worksheet.
  - ☐ 4. A small diagram or chart.

Question ID : 264330183336

Option 1 ID : 264330719067

Option 2 ID : 264330719064

Option 3 ID : 264330719066

Option 4 ID : 264330719065

Status : **Answered**

Chosen Option : 3

**Q.8** Which networking device operates at Layer 2 of the OSI model and forwards data based on MAC addresses?

- Ans**
- ✓ 1. Switch
  - ✗ 2. Hub
  - ✗ 3. Firewall
  - ✗ 4. Router

Question ID : 264330183354

Option 1 ID : 264330719138

Option 2 ID : 264330719137

Option 3 ID : 264330719139

Option 4 ID : 264330719136

Status : Not Answered

Chosen Option : --

**Q.9** Which backup device provides a convenient way to create system images and complete backups, but may require a lengthy restoration process?

- Ans**
- ✓ 1. Tape drive
  - ✗ 2. Network-attached storage (NAS)
  - ✗ 3. Solid-state drive (SSD)
  - ✗ 4. DVD-RW disc

Question ID : 264330183349

Option 1 ID : 264330719116

Option 2 ID : 264330719119

Option 3 ID : 264330719117

Option 4 ID : 264330719118

Status : Not Answered

Chosen Option : --

**Q.10** In MS-Excel 2019, what does the SUM function do?

- Ans**
- ✗ 1. It multiplies the values in a range.
  - ✓ 2. It adds up the values in a range.
  - ✗ 3. It counts the number of cells in a range.
  - ✗ 4. It finds the average of values in a range.

Question ID : 264330183338

Option 1 ID : 264330719072

Option 2 ID : 264330719074

Option 3 ID : 264330719075

Option 4 ID : 264330719073

Status : Answered

Chosen Option : 2

Q.11 Which of the following is NOT an example of web browser?

- Ans ☒ 1. Facebook  
☐ 2. Apple Safari  
☐ 3. Google Chrome  
☐ 4. Opera

Question ID : 264330183364

Option 1 ID : 264330719178

Option 2 ID : 264330719179

Option 3 ID : 264330719177

Option 4 ID : 264330719176

Status : Answered

Chosen Option : 1

Q.12 What is the function of the cache memory in a computer's memory hierarchy?

- Ans ☐ 1. To provide permanent storage for data and files.  
☒ 2. To store frequently used data for faster access by the CPU.  
☐ 3. To control the flow of data between the CPU and memory.  
☐ 4. To manage the allocation of memory resources to different programs.

Question ID : 264330183352

Option 1 ID : 264330719128

Option 2 ID : 264330719130

Option 3 ID : 264330719129

Option 4 ID : 264330719131

Status : Answered

Chosen Option : 2

Q.13 What is the keyboard shortcut for 'Copy' in most Windows applications?

- Ans ☐ 1. Ctrl + Z  
☒ 2. Ctrl + C  
☐ 3. Ctrl + X  
☐ 4. Ctrl + V

Question ID : 264330183350

Option 1 ID : 264330719123

Option 2 ID : 264330719121

Option 3 ID : 264330719120

Option 4 ID : 264330719122

Status : Answered

Chosen Option : 2

Q.14 What is a 'Firewall' in the context of network security?

- Ans
- ☐ 1. A software application for managing files and folders.
  - ☐ 2. A type of malware that spreads through email attachments.
  - ☒ 3. A security mechanism that filters and controls network traffic.
  - ☐ 4. A hardware device used to boost network performance.

Question ID : 264330183341  
Option 1 ID : 264330719086  
Option 2 ID : 264330719084  
Option 3 ID : 264330719087  
Option 4 ID : 264330719085  
Status : Answered  
Chosen Option : 3

Q.15 A high speed memory is placed between the Central Processing Unit (CPU) and the primary memory known as \_\_\_\_\_ memory.

- Ans
- ☐ 1. read only
  - ☐ 2. virtual
  - ☒ 3. cache
  - ☐ 4. secondary

Question ID : 264330183367  
Option 1 ID : 264330719189  
Option 2 ID : 264330719188  
Option 3 ID : 264330719191  
Option 4 ID : 264330719190  
Status : Answered  
Chosen Option : 3

Q.16 In computer registers, MAR stands for \_\_\_\_\_.

- Ans
- ☐ 1. Main Access Register
  - ☐ 2. Memory Access Register
  - ☒ 3. Memory Address Register
  - ☐ 4. Main Address Register

Question ID : 264330183366  
Option 1 ID : 264330719187  
Option 2 ID : 264330719185  
Option 3 ID : 264330719186  
Option 4 ID : 264330719184  
Status : Answered  
Chosen Option : 3

Q.17 What is a 'Trojan' in the context of network security?

Ans ☒ 1.

A protocol used for secure communication between devices on a network.

☒ 2.

A program that monitors network traffic for security breaches.

☒ 3.

A type of firewall that protects against viruses and malware.

☒ 4.

Malicious software disguised as legitimate software to gain unauthorised access.

Question ID : 264330183355

Option 1 ID : 264330719140

Option 2 ID : 264330719142

Option 3 ID : 264330719141

Option 4 ID : 264330719143

Status : Answered

Chosen Option : 4

Q.18 In Microsoft Word, what is the purpose of the 'Print Preview' feature?

Ans ☒ 1. To insert images and graphics into the document.

☒ 2. To format the font and style of the document.

☒ 3. To check the spelling and grammar of the document.

☒ 4. To view how the document will appear when printed.

Question ID : 264330183340

Option 1 ID : 264330719083

Option 2 ID : 264330719081

Option 3 ID : 264330719080

Option 4 ID : 264330719082

Status : Answered

Chosen Option : 4

Q.19 In File Explorer of Windows 10, the keyboard shortcut 'Num Lock + Asterisk sign (\*)' is used to \_\_\_\_\_.

Ans ☒ 1. display all subfolders under the selected folder

☒ 2. open the properties dialog box for the selected item

☒ 3. display the contents of the selected folder

☒ 4. collapse the selected folder

Question ID : 264330183373

Option 1 ID : 264330719213

Option 2 ID : 264330719215

Option 3 ID : 264330719212

Option 4 ID : 264330719214

Status : Not Answered

Chosen Option : --

Q.20 Which of the following is an example of the input device in a computer?

- Ans
- ☒ 1. Monitor
  - ☒ 2. Touchscreen
  - ☒ 3. Printer
  - ☒ 4. Speaker

Question ID : 264330183371

Option 1 ID : 264330719207

Option 2 ID : 264330719204

Option 3 ID : 264330719206

Option 4 ID : 264330719205

Status : Answered

Chosen Option : 2

OnlineGuru