

Constable GD in CAPFs SSF Rifleman GD in Assam Rifles and  
Sepoy in NCB Examination 2022

Roll Number	
Candidate Name	
Venue Name	iON Digital Zone iDZ 1 Moula Ali
Exam Date	12/01/2023
Exam Time	2:30 PM - 3:30 PM
Subject	Constable GD Examination 2022

Section : Part-A-General Intelligence and Reasoning

Q.1 Seven people D, E,F,G,H,I and J are sitting in a straight row, facing north. Only three people sit between D and H. E sits fourth to the left of J. Only D is between E and I. J sits third to the right of F. Who sits at the second position from the right end of the row?

- Ans
- ☒ 1. E
  - ☒ 2. D
  - ☒ 3. H
  - ☒ 4. I

Question ID : 26433068285  
Status : Answered  
Chosen Option : 3

Q.2 Which of the following numbers will replace the question mark (?) in the given series?  
6, 10, 19, 35, ? , 96

- Ans
- ☒ 1. 70
  - ☒ 2. 68
  - ☒ 3. 60
  - ☒ 4. 74

Question ID : 26433070220  
Status : Answered  
Chosen Option : 3

Q.3 Three statements are given followed by three conclusions numbered 1, 2 and 3. Assuming the statements to be true, even if they seem to be at variance with commonly known facts, decide which of the conclusions logically follow(s) from the statements.

Statements:

Some shoes are slippers.

Some slippers are socks.

All socks are sandals.

Conclusions:

1. Some sandals are shoes.

2. Some sandals are slippers.

3. Some socks are shoes.

- Ans
- ☒ 1. Only conclusion 2 follows
  - ☒ 2. Only conclusions 1 and 2 follow
  - ☒ 3. Only conclusions 2 and 3 follow
  - ☒ 4. Only conclusion 3 follows

Question ID : 26433087132  
Status : Answered  
Chosen Option : 1

**Q.4** Select the option that is related to the fifth number in the same way as the second number is related to the first number and the fourth number is related to the third number.  
 $18 : 4 :: 36 : 16 :: 27 : ?$

- Ans ☒ 1. 8  
☒ 2. 9  
☒ 3. 7  
☒ 4. 10

Question ID : 26433069412  
Status : Not Answered  
Chosen Option : --

**Q.5** Six friends (Aman, Biplab, Chirantan, Divya, Elizabeth and Firoz) are sitting around a circular table facing the centre. Aman sits third to the left of Biplab. Chirantan is an immediate neighbour of Aman. Elizabeth sits second to the right of Divya. Chirantan is not an immediate neighbour of Divya. Who sits between Aman and Elizabeth?

- Ans ☒ 1. Firoz  
☒ 2. Divya  
☒ 3. Chirantan  
☒ 4. Biplab

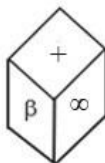
Question ID : 26433092769  
Status : Answered  
Chosen Option : 3

**Q.6** In a certain code language, 'fruit hat string' is coded as 'worm bee wheel', 'hat fruit' is coded as 'bee worm', and 'string hat' is coded as 'wheel bee'. What is the code word for 'fruit'?

- Ans ☒ 1. bee  
☒ 2. worm  
☒ 3. wheel  
☒ 4. hat

Question ID : 26433079368  
Status : Answered  
Chosen Option : 2

**Q.7** Two different positions of the same dice are shown having symbols- +, @, O, ∞, €, and β. Find the symbol on the face opposite the face showing 'O'.



- Ans ☒ 1. €  
☒ 2. @  
☒ 3. +  
☒ 4. ∞

Question ID : 26433085527  
Status : Answered  
Chosen Option : 4

Q.8 Select the option that is related to the third word in the same way as the second word is related to the first word. (The words must be considered as meaningful English words and must not be related to each other based on the number of letters/number of consonants/vowels in the word.)  
Virology : Viruses :: Cardiology : ?

- Ans ☒ 1. Skull  
☒ 2. Head  
☒ 3. Lungs  
☒ 4. Heart

Question ID : 26433067365  
Status : Answered  
Chosen Option : 4

Q.9 Which figure should replace the question mark (?) if the series were to be continued?

P	L	=	□	O	=	L	S	
O	Z	□	P	S	△	△	P	S
=	△	O	L	L	□	△	↑	□
								?

- Ans ☒ 1. 

△	L
□	↑
=	S

  
☒ 2. 

△	L
□	O
=	↑
	S

  
☒ 3. 

△	□
L	↑
O	=
	S

  
☒ 4. 

S	=
□	O
L	↑
	△

Question ID : 26433076638  
Status : Not Answered  
Chosen Option : --

Q.10 Which two signs should be interchanged to make the below equation mathematically correct?  
 $120 + 18 \times 40 - 10 \div 20 = 172$

- Ans ☒ 1. - and +  
☒ 2. + and ×  
☒ 3. + and ÷  
☒ 4. ÷ and -

Question ID : 264330117538  
Status : Answered  
Chosen Option : 4

Q.11 Which of the following letter-clusters will replace the question mark (?) in the given series?  
GMPJ, HLOK, IKNL, JJMM, ?

- Ans
- ☒ 1. KKMN
  - ☒ 2. LKLN
  - ☒ 3. LKLO
  - ☒ 4. KILN

Question ID : 26433076442  
Status : Answered  
Chosen Option : 4

Q.12 In a certain code language, 'PARENT' is written as '148' and 'WRANGLE' is written as '160'.How will 'GRANTED' be written in that language?

- Ans
- ☒ 1. 134
  - ☒ 2. 67
  - ☒ 3. 138
  - ☒ 4. 69

Question ID : 26433069472  
Status : Answered  
Chosen Option : 3

Q.13 Which of the following numbers will replace the question mark (?) in the given series?  
20, 24, 33, ?, 107, 228, 397

- Ans
- ☒ 1. 82
  - ☒ 2. 86
  - ☒ 3. 29
  - ☒ 4. 58

Question ID : 26433076753  
Status : Answered  
Chosen Option : 4

Q.14 Which letter-cluster will replace the question mark (?) to complete the given series?  
BDGF, ACFE, ?, YADC, XZCB

- Ans
- ☒ 1. ZBED
  - ☒ 2. YBED
  - ☒ 3. ZAFE
  - ☒ 4. YAFD

Question ID : 26433067713  
Status : Answered  
Chosen Option : 1

Q.15 Select the correct combination of mathematical signs to sequentially replace the \* signs and to balance the given equation.

$(120 * 15) * 9 * \sqrt[4]{81} * 17 * 28 * 95$

- Ans
- 1. +, -, =, -, +, ×
  - 2. ÷, -, =, -, ×, -
  - 3. ×, =, -, ÷, +, -
  - 4. ÷, ×, +, ×, -, =

Question ID : 26433081000  
Status : Answered  
Chosen Option : 4

Q.16 Which option represents the correct order of the given words as they would appear in the English dictionary?

- 1 culture
- 2 cult
- 3 cultivate
- 4 cupid
- 5 cumin

- Ans
- 1. 2,3,1,5,4
  - 2. 3,2,1,4,5
  - 3. 2,3,1,4,5
  - 4. 2,1,3,5,4

Question ID : 26433069286  
Status : Answered  
Chosen Option : 1

Q.17 Select the correct mirror image of the given figure when the mirror is placed at MN as shown below.

JudGEmenT

M

N

- Ans
- 1. TnəMəɟɹuɹ
  - 2. JUDGEmenT
  - 3. TnəɟEməɹuɹ
  - 4. TnəMəɟɹuɹ


Question ID : 26433085556  
Status : Answered  
Chosen Option : 1

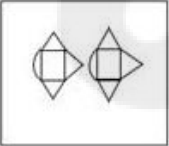
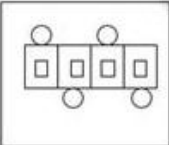
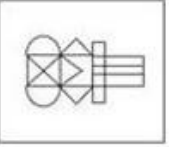
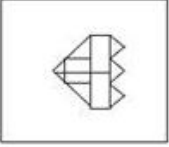
**Q.18** Select the option that is related to the fifth letter-cluster in the same way as the second letter-cluster is related to the first letter-cluster and the fourth letter-cluster is related to the third letter-cluster.  
IFHO : LCEK :: HIJK : KFGG :: QLGK : ?

**Ans** ☒ 1. ITHD  
☒ 2. TIDG  
☒ 3. ITDH  
☒ 4. TIHD

Question ID : 26433080465  
Status : Answered  
Chosen Option : 2

**Q.19** Select the option figure in which the question figure is embedded (Rotation is NOT allowed).



**Ans** ☒ 1.   
☒ 2.   
☒ 3.   
☒ 4. 

Question ID : 26433070209  
Status : Answered  
Chosen Option : 3

**Q.20** A is married to Z. Z has 3 children L, M and N. Z is not the father of the children. P is the mother of A. L is the husband of D. M has 2 daughters H and J. How is Z related to P?

**Ans** ☒ 1. Daughter  
☒ 2. Daughter in law  
☒ 3. Son  
☒ 4. Mother

Question ID : 26433074603  
Status : Answered  
Chosen Option : 2

**Q.1 Which is NOT the correct statement about the Governor?**

- Ans ☒ 1. He appoints the Chief Minister and other Ministers.
- ☒ 2. He has the power to grant pardons, reprieves and forgive the death penalty of a person
- ☒ 3. He may issue Ordinances under certain circumstances
- ☒ 4. The state executive power is vested with the Governor.

Question ID : 26433054107  
Status : Answered  
Chosen Option : 2

**Q.2 Identify the country called 'the country of winds'.**

- Ans ☒ 1. Denmark
- ☒ 2. Czech Republic
- ☒ 3. Germany
- ☒ 4. Poland

Question ID : 26433096236  
Status : Not Answered  
Chosen Option : --

**Q.3 In which year did Congress and Muslim League signed the Lucknow pact?**

- Ans ☒ 1. 1914
- ☒ 2. 1916
- ☒ 3. 1910
- ☒ 4. 1912

Question ID : 264330115706  
Status : Not Answered  
Chosen Option : --

**Q.4 \_\_\_\_\_ can be visualized as a functional unit of nature, where living organisms interact among themselves and also with the surrounding physical environment.**

- Ans ☒ 1. A family
- ☒ 2. A universe
- ☒ 3. An ecosystem
- ☒ 4. A herd

Question ID : 264330115248  
Status : Answered  
Chosen Option : 3

**Q.5 What is the Full Form of BCCI?**

- Ans ☒ 1. Board of Cricket Control
- ☒ 2. Board of Control of Cycling in India
- ☒ 3. Board of Control for Cricket in India
- ☒ 4. Basic Cricket Control Board

Question ID : 264330116286  
Status : Answered  
Chosen Option : 3

Q.6 India's first five-year plan was launched in \_\_\_\_\_.

- Ans
- ☒ 1. 1901
  - ☒ 2. 1961
  - ☒ 3. 1971
  - ☒ 4. 1951

Question ID : 264330115383  
Status : Not Answered  
Chosen Option : --

Q.7 Apart from the Cash Reserve Ratio, banks are also required to keep some reserves in liquid form in the short term, referred as \_\_\_\_\_

- Ans
- ☒ 1. Statutory Liquidity Repo
  - ☒ 2. State Liquidity Ratio
  - ☒ 3. Statutory Liquidity Ratio
  - ☒ 4. Statutory License Ratio

Question ID : 264330115325  
Status : Answered  
Chosen Option : 3

Q.8 In which year was the Mahatma Gandhi National Rural Employment Guarantee Act (MGNREGA) passed?

- Ans
- ☒ 1. 1993
  - ☒ 2. 2005
  - ☒ 3. 1995
  - ☒ 4. 2000

Question ID : 264330116072  
Status : Answered  
Chosen Option : 2

Q.9 President of India appointed senior advocate \_\_\_\_\_ as the next Attorney-General for India in September 2022.

- Ans
- ☒ 1. Ram Jethmalani
  - ☒ 2. R Venkataramani
  - ☒ 3. Pravin Anand
  - ☒ 4. Jasbina Ahluwalia

Question ID : 264330114917  
Status : Not Answered  
Chosen Option : --

Q.10 Who was the prime minister of India when the fundatmental duties were included in the Indian constitution?

- Ans
- ☒ 1. Indira Gandhi
  - ☒ 2. Rajiv Gandhi
  - ☒ 3. Manmohan Singh
  - ☒ 4. Jawaharlal Nehru

Question ID : 26433089951  
Status : Not Answered  
Chosen Option : --



Q.11 Green Revolution mainly revolves around \_\_\_\_\_.

- Ans
- ☒ 1. Rain harvesting
  - ☒ 2. Natural Vegetation
  - ☒ 3. High Yield Variety Programme
  - ☒ 4. Use of Natural Fertilizers

Question ID : 264330116152  
Status : Answered  
Chosen Option : 3

Q.12 Who was the coach of the U-19 Indian cricket team at the ICC U19 World Cup 2022?

- Ans
- ☒ 1. Ajit Agarkar
  - ☒ 2. Mohammed Kaif
  - ☒ 3. Anil Kumble
  - ☒ 4. Hrishikesh Kanitkar

Question ID : 26433090750  
Status : Not Answered  
Chosen Option : --

Q.13 Thiruvathira festival is mainly celebrated in which of these states?

- Ans
- ☒ 1. Odisha
  - ☒ 2. Assam
  - ☒ 3. Punjab
  - ☒ 4. Kerala

Question ID : 264330109305  
Status : Answered  
Chosen Option : 4

Q.14 What is used for manufacturing synthetic fibers, synthetic rubber, plastics, dye-stuffs, drugs and pharmaceuticals?

- Ans
- ☒ 1. sugar cane
  - ☒ 2. petrochemicals
  - ☒ 3. natural gas
  - ☒ 4. coal

Question ID : 264330115572  
Status : Answered  
Chosen Option : 1

Q.15 Which of the following is NOT a sedimentary rock?

- Ans
- ☒ 1. Granite
  - ☒ 2. Sand stone
  - ☒ 3. Loess
  - ☒ 4. Shale

Question ID : 26433089661  
Status : Not Answered  
Chosen Option : --

Q.16 Who has been appointed as the Revenue Secretary by the Indian government in October 2022?

- Ans
- ☒ 1. S.S Nakul
  - ☐ 2. Sanjay Malhotra
  - ☐ 3. Tarun Bajaj
  - ☐ 4. Ajay Bhushan Pandey

Question ID : 264330115028  
Status : Answered  
Chosen Option : 3

Q.17 Who presented the Criminal Procedure (Identification) Bill, 2022 on March 28 in Lok Sabha?

- Ans
- ☐ 1. Meenakshi Lekhi
  - ☒ 2. Ajay Kumar Mishra
  - ☐ 3. Krishan Pal
  - ☐ 4. Rao Inderjit Singh

Question ID : 264330116218  
Status : Not Answered  
Chosen Option : --

Q.18 According to Megasthenes, the guards of Chandragupta rode \_\_\_\_\_ decorated with gold and silver during royal processions.

- Ans
- ☒ 1. elephants
  - ☐ 2. unicorns
  - ☐ 3. bulls
  - ☐ 4. horses

Question ID : 26433085212  
Status : Answered  
Chosen Option : 1

Q.19 Kalbelia is a famous folk dance of which Indian state?

- Ans
- ☐ 1. Odisha
  - ☐ 2. Bihar
  - ☐ 3. West Bengal
  - ☒ 4. Rajasthan

Question ID : 26433072923  
Status : Not Answered  
Chosen Option : --

Q.20 Which of the following festivals celebrates the harvest season in August – September?

- Ans
- ☒ 1. Onam
  - ☐ 2. Makar Sankranti
  - ☐ 3. Lohri
  - ☐ 4. Baisakhi

Question ID : 264330115872  
Status : Not Answered  
Chosen Option : --

**Q.1** The ratio of the third proportion of 5 and 12 with the fourth proportion of 5, 8 and 9 is:

Ans

☒ 1. 2 : 1

☐ 2. 2 : 3

☐ 3. 1 : 2

☐ 4. 3 : 2

Question ID : 26433087372

Status : Answered

Chosen Option : 1

**Q.2** Anil started his journey in the morning. Till 10 a.m., he covered  $\frac{1}{2}$  of his journey, and on the same day till 1 a.m., he covered  $\frac{4}{5}$  of his journey. At what time did he start his journey?

Ans

☐ 1. 2.00 a.m.

☐ 2. 4.00 a.m.

☒ 3. 5.00 a.m.

☐ 4. 3.30 a.m.

Question ID : 26433075350

Status : Answered

Chosen Option : 3

**Q.3** A cone of height 8 cm and base radius 4 cm is carved from a rectangular block of wood 8 cm × 6 cm × 4 cm. The percentage of wood wasted is approximately:

Ans

☐ 1. 56%

☒ 2. 30%

☐ 3. 58%

☐ 4. 48%

Question ID : 26433075399

Status : Answered

Chosen Option : 2

**Q.4** The Difference between compound interest, compounding annually and simple interest on an amount of ₹ 500 for 2 years is ₹ 1.25. What is the rate of interest per annum?

Ans

☐ 1. 2%

☐ 2. 4%

☐ 3. 3%

☒ 4. 5%

Question ID : 26433074296

Status : Answered

Chosen Option : 4

**Q.5** An article is listed at ₹1,200. A customer pays ₹972 for it after getting two successive discounts. If the rate of the first discount is 10%, then the rate of the second discount is:

- Ans
- ☒ 1. 14%
  - ☒ 2. 10%
  - ☒ 3. 16%
  - ☒ 4. 12%

Question ID : 26433082384  
Status : Answered  
Chosen Option : 2

**Q.6** The fourth proportional to 3, 12, 14 is:

- Ans
- ☒ 1. 35
  - ☒ 2. 28
  - ☒ 3. 56
  - ☒ 4. 49

Question ID : 26433080119  
Status : Answered  
Chosen Option : 3

**Q.7** An iron ball of radius 21 cm is melted and recast into spherical balls of radius 7 cm. Find the number of spherical balls.

- Ans
- ☒ 1. 9
  - ☒ 2. 21
  - ☒ 3. 18
  - ☒ 4. 27

Question ID : 26433073052  
Status : Answered  
Chosen Option : 4

**Q.8** Find the sum of the digits of the smallest 6-digit number divisible by 18, 24 and 25.

- Ans
- ☒ 1. 12
  - ☒ 2. 10
  - ☒ 3. 15
  - ☒ 4. 9

Question ID : 264330116634  
Status : Answered  
Chosen Option : 4

**Q.9** The value of  $1 \div 2 + 3 - 5 \times \frac{1}{3}$  of  $15 - \{75 \div (28 - 3)\}$  is:

- Ans
- ☒ 1. -25
  - ☒ 2.  $-\frac{49}{2}$
  - ☒ 3.  $\frac{49}{2}$
  - ☒ 4. 25

Question ID : 26433075177  
Status : Answered  
Chosen Option : 2

Q.10 A vegetable vendor does his sales using a weight which is 12% less than the actual weight and earns a profit of 32% on the cost price. Find the total profit percentage?

- Ans
- ☒ 1. 44%
  - ☒ 2. 40%
  - ☒ 3. 50%
  - ☒ 4. 45%

Question ID : 26433075913  
Status : Answered  
Chosen Option : 3

Q.11 A and B can complete a work in 18 days and 36 days respectively. They work together for 8 days and then A leaves. How many days will B take to complete the rest of the work?

- Ans
- ☒ 1. 15
  - ☒ 2. 12
  - ☒ 3. 18
  - ☒ 4. 10

Question ID : 26433076403  
Status : Answered  
Chosen Option : 2

Q.12 What is the average of the first 10 multiples of 3?

- Ans
- ☒ 1. 16.5
  - ☒ 2. 14.5
  - ☒ 3. 15.5
  - ☒ 4. 11.5

Question ID : 26433076393  
Status : Answered  
Chosen Option : 1

Q.13 If the price of potatoes increases by 10 percent, then by how much percent a user has to cut down on his consumption of potatoes, so that the expenditure on potatoes remains unchanged?

- Ans
- ☒ 1. 16.4 percent
  - ☒ 2. 15.8 percent
  - ☒ 3. 12.5 percent
  - ☒ 4. 9.1 percent

Question ID : 264330116822  
Status : Answered  
Chosen Option : 4

Q.14 The current value of a car is ₹ 8,50,000 and its value is depreciating at the rate of 10% per annum. What will be its value (in ₹ ) after 4 years?

- Ans
- ☒ 1. 5,47,685
  - ☒ 2. 5,57,685
  - ☒ 3. 5,67,685
  - ☒ 4. 5,57,865

Question ID : 26433075560  
Status : Answered  
Chosen Option : 2

**Q.15** What is the faulty weight used by a dishonest shopkeeper instead of the original weight of 1 kg to get a profit of 25%?

- Ans
- ☒ 1. 250 grams
  - ☒ 2. 800 grams
  - ☒ 3. 640 grams
  - ☒ 4. 980 grams

Question ID : 26433075810  
Status : Answered  
Chosen Option : 2

**Q.16** A, B, and C can complete a work in 30, 60, and 120 days respectively. A left the work 10 days before the work was completed and B left 5 days before the completion of the work. Find the number of days required to complete the whole work.

- Ans
- ☒ 1. 170/7 days
  - ☒ 2. 144/7 days
  - ☒ 3. 89/7 days
  - ☒ 4. 190/7 days

Question ID : 264330116902  
Status : Answered  
Chosen Option : 1

**Q.17** Mr. Sharma spends 15% of his total income on rent and 75% of the remaining part on other expenses and still saves Rs.1,700 monthly. What is his monthly income?

- Ans
- ☒ 1. Rs.8,000
  - ☒ 2. Rs.7,000
  - ☒ 3. Rs.7,500
  - ☒ 4. Rs.8,500

Question ID : 26433080296  
Status : Answered  
Chosen Option : 1

**Q.18** Aravind runs  $\frac{5}{4}$  times as fast as Bhanu. In a race, if Aravind gives a lead of 60m to Bhanu, find the distance from the starting point where both of them will meet.

- Ans
- ☒ 1. 320 m
  - ☒ 2. 340 m
  - ☒ 3. 360 m
  - ☒ 4. 300 m

Question ID : 26433063957  
Status : Answered  
Chosen Option : 4

Q.19 The marked price of a double bed is ₹42,000. The customer gets a cash discount of ₹1,000 and gets a scratch card promising a discount of 5% to 10%. Determine the difference between the least and the maximum selling price of the bed.

- Ans
- ☒ 1. ₹1,880
  - ☒ 2. ₹2,050
  - ☒ 3. ₹1,910
  - ☒ 4. ₹1,940

Question ID : 26433080111  
Status : Answered  
Chosen Option : 2

Q.20 Arjun rides his bike 10 km at an average speed of 30 km/h, and again travels 14 km at an average speed of 25 km/h. What is his average speed (approx.) for the entire trip?

- Ans
- ☒ 1. 27.68 km/h
  - ☒ 2. 26.87 km/h
  - ☒ 3. 29.81 km/h
  - ☒ 4. 28.76 km/h

Question ID : 26433076221  
Status : Answered  
Chosen Option : 2

Section : Part-D-English

Q.1 Select the word segment that substitutes (replaces) the bracketed word segment correctly and completes the sentence meaningfully.

When the last Tsar of Russia (were arrested by revolutionaries), he and his family were hiding at a palace near St. Petersburg; now that palace is open to tourists.

- Ans
- ☒ 1. is arresting from revolutionaries
  - ☒ 2. was arrested by revolutionaries
  - ☒ 3. were arrest by revolutionaries
  - ☒ 4. is arrested by revolutionaries

Question ID : 26433088964  
Status : Answered  
Chosen Option : 2

Q.2 Select the correct word for the blanks in the given sentence.

Sushant is a very \_\_\_\_\_ person and the \_\_\_\_\_ of first ten natural numbers is 5.5.

- Ans
- ☒ 1. clever
  - ☒ 2. mean
  - ☒ 3. honest
  - ☒ 4. shrewd

Question ID : 26433060539  
Status : Answered  
Chosen Option : 2

**Q.3** Select the most appropriate synonym of the given word.

**Consistent**

- Ans** ☒ 1. Evolve  
☒ 2. Change  
☒ 3. Constant  
☒ 4. Alter

Question ID : 26433073636

Status : **Answered**

Chosen Option : 3

**Q.4** Select the correct word for the blanks in the given sentence.

The tree has a brown \_\_\_\_\_ and the dogs \_\_\_\_\_ at the stranger.

- Ans** ☒ 1. tail  
☒ 2. sound  
☒ 3. trunk  
☒ 4. bark

Question ID : 26433060529

Status : **Answered**

Chosen Option : 4

**Q.5** Select the most appropriate synonym of the word given below to fill in the blank in the following sentence.

**Pamper**

My grandmother said, "Don't \_\_\_\_\_ the kid. He will get spoiled".

- Ans** ☒ 1. bend  
☒ 2. comfortable  
☒ 3. attend  
☒ 4. coddle

Question ID : 26433084777

Status : **Answered**

Chosen Option : 2

**Q.6** Select the most appropriate option to substitute the underlined segment in the given sentence.

This is an olden building of historical importance.

- Ans** ☒ 1. ancient  
☒ 2. elder  
☒ 3. older  
☒ 4. very older

Question ID : 264330100291

Status : **Answered**

Chosen Option : 1



**Q.7** The following sentence has been split into four segments. Identify the segment that contains a grammatical error.

The peon / was brought / a cup of / coffee for Naina.

- Ans**
- ☒ 1. coffee for Naina
  - ☒ 2. a cup of
  - ☒ 3. was brought
  - ☒ 4. The peon

Question ID : **26433094743**  
Status : **Answered**  
Chosen Option : **3**

**Q.8** Select the most appropriate synonym of the given word.  
Earn

- Ans**
- ☒ 1. Receive
  - ☒ 2. Lose
  - ☒ 3. Accord
  - ☒ 4. Surrender

Question ID : **26433086427**  
Status : **Answered**  
Chosen Option : **1**

**Q.9** Select the most appropriate meaning of the given idiom.

Fit as a fiddle

- Ans**
- ☒ 1. In good health
  - ☒ 2. Limited in scope
  - ☒ 3. Emergency situation
  - ☒ 4. To be of perfect size

Question ID : **26433073708**  
Status : **Answered**  
Chosen Option : **4**

**Q.10** The sentence given below has one misspelt word. Spot the **INCORRECTLY** spelt word and select its correct spelling.

Some diseases are due to neurological disorders.

- Ans**
- ☒ 1. Newrologecal
  - ☒ 2. Neurological
  - ☒ 3. Neurologecal
  - ☒ 4. Newrological

Question ID : **26433073551**  
Status : **Answered**  
Chosen Option : **2**

**Q.11** Select the most appropriate option to fill in the blank.  
The private \_\_\_\_\_ has contributed immensely to the country's economy.

- Ans**
- ☒ 1. division
  - ☒ 2. segment
  - ☒ 3. section
  - ☒ 4. sector

Question ID : **26433084650**  
Status : **Answered**  
Chosen Option : **4**

Q.12 Select the most appropriate meaning of the given idiom.

Take it with a grain of salt

- Ans ☒ 1. To calculate things with utmost precision
- ☒ 2. To misinterpret that the real situation is hidden
- ☒ 3. To understand that something is likely to be untrue
- ☒ 4. To imagine that someone is working against you

Question ID : 26433073492  
Status : Marked For Review  
Chosen Option : 2

Q.13 Fill in the blank by selecting the meaningful and correctly spelt word from the given options.

Nowadays, the police get a long \_\_\_\_\_ of drug peddlers every day.

- Ans ☒ 1. list
- ☒ 2. lest
- ☒ 3. leest
- ☒ 4. least

Question ID : 26433072064  
Status : Answered  
Chosen Option : 1

Q.14 Select the most appropriate ANTONYM of the given word.  
Hope

- Ans ☒ 1. Despair
- ☒ 2. Promise
- ☒ 3. Craving
- ☒ 4. Fantasy

Question ID : 26433086377  
Status : Answered  
Chosen Option : 1

Q.15 Select the most appropriate ANTONYM of the given word.

Generous

- Ans ☒ 1. Liberal
- ☒ 2. Free
- ☒ 3. Selfish
- ☒ 4. Selfless

Question ID : 26433072270  
Status : Answered  
Chosen Option : 3

**Comprehension:**

In the following passage, some words have been deleted. Read the passage carefully and select the most appropriate option to fill in each blank.

An initiative has been (1) \_\_\_\_\_ in the educational reform sector in form of Social and Emotional Learning (SEL). This novel (2) \_\_\_\_\_ helps students to understand and manage their own emotions. The students (3) \_\_\_\_\_ and learn in a constructive manner. This concept (4) \_\_\_\_\_ momentum with the publication of the best seller by Daniel Goleman titled 'Emotional Intelligence: Why it can matter more than IQ'. It (5) \_\_\_\_\_ the enhancement of the given competencies: speaking and listening, cooperative skills and problem solving.

**SubQuestion No : 16**

**Q.16** Select the most appropriate option to fill in blank no. 1.

- Ans ☒ 1. discovered  
☒ 2. started  
☒ 3. reckoned  
☒ 4. established

Question ID : **26433072244**  
Status : **Answered**  
Chosen Option : **2**

**Comprehension:**

In the following passage, some words have been deleted. Read the passage carefully and select the most appropriate option to fill in each blank.

An initiative has been (1) \_\_\_\_\_ in the educational reform sector in form of Social and Emotional Learning (SEL). This novel (2) \_\_\_\_\_ helps students to understand and manage their own emotions. The students (3) \_\_\_\_\_ and learn in a constructive manner. This concept (4) \_\_\_\_\_ momentum with the publication of the best seller by Daniel Goleman titled 'Emotional Intelligence: Why it can matter more than IQ'. It (5) \_\_\_\_\_ the enhancement of the given competencies: speaking and listening, cooperative skills and problem solving.

**SubQuestion No : 17**

**Q.17** Select the most appropriate option to fill in blank no. 2.

- Ans ☒ 1. intention  
☒ 2. application  
☒ 3. concept  
☒ 4. experiment

Question ID : **26433072245**  
Status : **Marked For Review**  
Chosen Option : **3**

**Comprehension:**

In the following passage, some words have been deleted. Read the passage carefully and select the most appropriate option to fill in each blank.

An initiative has been (1) \_\_\_\_\_ in the educational reform sector in form of Social and Emotional Learning (SEL). This novel (2) \_\_\_\_\_ helps students to understand and manage their own emotions. The students (3) \_\_\_\_\_ and learn in a constructive manner. This concept (4) \_\_\_\_\_ momentum with the publication of the best seller by Daniel Goleman titled 'Emotional Intelligence: Why it can matter more than IQ'. It (5) \_\_\_\_\_ the enhancement of the given competencies: speaking and listening, cooperative skills and problem solving.

**SubQuestion No : 18**

**Q.18 Select the most appropriate option to fill in blank no. 3.**

- Ans** ☒ 1. act  
☒ 2. affect  
☒ 3. mingle  
☒ 4. interact

Question ID : **26433072246**  
Status : **Answered**  
Chosen Option : **4**

**Comprehension:**

In the following passage, some words have been deleted. Read the passage carefully and select the most appropriate option to fill in each blank.

An initiative has been (1) \_\_\_\_\_ in the educational reform sector in form of Social and Emotional Learning (SEL). This novel (2) \_\_\_\_\_ helps students to understand and manage their own emotions. The students (3) \_\_\_\_\_ and learn in a constructive manner. This concept (4) \_\_\_\_\_ momentum with the publication of the best seller by Daniel Goleman titled 'Emotional Intelligence: Why it can matter more than IQ'. It (5) \_\_\_\_\_ the enhancement of the given competencies: speaking and listening, cooperative skills and problem solving.

**SubQuestion No : 19**

**Q.19 Select the most appropriate option to fill in blank no. 4.**

- Ans** ☒ 1. gratified  
☒ 2. gained  
☒ 3. relieved  
☒ 4. profited

Question ID : **26433072247**  
Status : **Answered**  
Chosen Option : **2**

### Comprehension:

In the following passage, some words have been deleted. Read the passage carefully and select the most appropriate option to fill in each blank.

An initiative has been (1) \_\_\_\_\_ in the educational reform sector in form of Social and Emotional Learning (SEL). This novel (2) \_\_\_\_\_ helps students to understand and manage their own emotions. The students (3) \_\_\_\_\_ and learn in a constructive manner. This concept (4) \_\_\_\_\_ momentum with the publication of the best seller by Daniel Goleman titled 'Emotional Intelligence: Why it can matter more than IQ'. It (5) \_\_\_\_\_ the enhancement of the given competencies: speaking and listening, cooperative skills and problem solving.

#### SubQuestion No : 20

Q.20 Select the most appropriate option to fill in blank no. 5.

Ans ☒ 1. incorporates

☐ 2. influences

☐ 3. compares

☐ 4. merges

Question ID : 26433072248

Status : Answered

Chosen Option : 1

### Section : Part-D-Hindi

Q.1 समझ-बुझकर काम करना चाहिए।

विकल्पों में से चुनकर बताइए कि उक्त वाक्य में रेखांकित पद किस प्रकार की क्रिया है?

Ans ☐ 1. संयुक्त क्रिया

☒ 2. पुनरुक्त क्रिया

☐ 3. प्रेरणार्थक क्रिया

☐ 4. नाम बोधक क्रिया

Question ID : 26433079228

Status : Not Answered

Chosen Option : --

Q.2 निम्नलिखित वाक्य में रेखांकित खंड के स्थान पर प्रयुक्त होने वाले सबसे उपयुक्त विकल्प का चयन कीजिए-

विनय के पुस्तक पढ़ी।

Ans ☒ 1. ने

☐ 2. से

☐ 3. में

☐ 4. को

Question ID : 26433079662

Status : Not Answered

Chosen Option : --

Q.3 'यथासंभव' के लिए कौन सा वाक्यांश उपयुक्त होगा?

Ans ☐ 1. यथारूप

☐ 2. संभवतः

☐ 3. संभव हो

☒ 4. जहाँ तक हो सके

Question ID : 26433062692

Status : Not Answered

Chosen Option : --

Q.4 दिए गए शब्दों में से उचित शब्द से वाक्य पूर्ण करें --  
महानगरों में कई जगह कूड़े के \_\_\_\_\_ दिखाई देते हैं।

- Ans
- ☒ 1. अंबर
  - ☒ 2. अंबरसारी
  - ☒ 3. अंबर
  - ☒ 4. अंबारी

Question ID : 26433062910  
Status : Not Answered  
Chosen Option : --

Q.5 निम्नलिखित वाक्य के किस शब्द में अशुद्धि है?  
प्रत्येक छोटी-मोटी विशेषता को देखनि चाहिए।

- Ans
- ☒ 1. देखनि
  - ☒ 2. प्रत्येक
  - ☒ 3. विशेषता
  - ☒ 4. चाहिए।

Question ID : 26433066771  
Status : Not Answered  
Chosen Option : --

Q.6 निम्न में से किस वाक्य में 'कलह' के सही पर्यायवाची शब्द का प्रयोग हुआ है?

- Ans
- ☒ 1. सर्वत्र शांति छाई हुई है।
  - ☒ 2. निशा का सुजय से कोई रिश्ता नहीं है।
  - ☒ 3. रतन और मयंक के बीच कल विवाद हो गया।
  - ☒ 4. राधा ने उन दोनों की सुलह कराई।

Question ID : 26433067016  
Status : Not Answered  
Chosen Option : --

Q.7 निम्नलिखित में से किस वाक्य में तुलनात्मक विशेषण की उत्तमावस्था के अशुद्ध रूप का उपयोग हुआ है?

- Ans
- ☒ 1. हल्क सबसे ज्यादा बलवान है।
  - ☒ 2. सभी महासागरों में प्रशांत महासागर विशालतम है।
  - ☒ 3. उसका स्वभाव कोमलरतम है।
  - ☒ 4. इन सब में से तुम सबसे सुन्दर हो।

Question ID : 26433062996  
Status : Not Answered  
Chosen Option : --

Q.8 निम्नलिखित वाक्य में रेखांकित शब्द का दिए गये विकल्पों में से कौन-सा शब्द पर्यायवाची नहीं है?  
सरदार पटेल की प्रतिमा 'लोहे' की बनी है।

- Ans
- ☒ 1. लाह
  - ☒ 2. लौह
  - ☒ 3. अयस
  - ☒ 4. आहन

Question ID : 26433085072  
Status : Not Answered  
Chosen Option : --

Q.9 निम्न वाक्य में रेखांकित शब्द-समूह के लिए सर्वाधिक उपयुक्त विकल्प चुनें।  
तुम्हारा अपराध क्षमा किए जाने योग्य है।

- Ans ☒ 1. गलत  
☒ 2. अक्षम्य  
☒ 3. क्षम्य  
☒ 4. अशोभनीय

Question ID : 26433079208  
Status : Not Answered  
Chosen Option : --

Q.10 वाक्य में रेखांकित अंश के लिए उचित मुहावरा दिए गए विकल्पों में से चुनिए-  
न माया मिली न राम, वह कहीं का नहीं रहा।

- Ans ☒ 1. चल बसना  
☒ 2. गूलर का फूल  
☒ 3. घड़ों पानी पड़ना  
☒ 4. घर का न घाट का

Question ID : 26433062305  
Status : Not Answered  
Chosen Option : --

Q.11 निम्नलिखित में से किस वाक्य में 'अग्रज' के सही विलोम शब्द का उपयोग हुआ है?

- Ans ☒ 1. मोहन मेरा अपना अनुज्य है।  
☒ 2. मोहन मेरा अनूज है।  
☒ 3. मोहन मेरा ही आनुज है।  
☒ 4. मोहन मेरा अनुज है।

Question ID : 26433091220  
Status : Not Answered  
Chosen Option : --

Q.12 निम्न में से शुद्ध वाक्य का चयन कीजिए।

- Ans ☒ 1. इस लड़की का चाल ठीक नहीं है।  
☒ 2. उन लोगों की मनोवृत्ति ठीक नहीं लगती।  
☒ 3. यहाँ के हवा – पानी बहुत खराब है।  
☒ 4. खुदा की कसम गजब हो गई।

Question ID : 26433063074  
Status : Not Answered  
Chosen Option : --

Q.13 निम्नलिखित विकल्पों में से 'जो उचित समय पर न हो' वाक्यांश के लिए एक सार्थक शब्द क्या होगा ?

- Ans ☒ 1. काल्पनिक  
☒ 2. सामयिक  
☒ 3. असामयिक  
☒ 4. कल्पनाजन्य

Question ID : 26433062536  
Status : Not Answered  
Chosen Option : --

Q.14 निम्नलिखित अर्थ को समझाने वाले मुहावरे का चयन विकल्पों में से कीजिए।  
इज्जत उतारना

- Ans ☒ 1. मिट्टी पलीद करना  
☒ 2. मुँह की बात छीनना  
☒ 3. मखमली जूते मारना  
☒ 4. मुँह चाटना

Question ID : 26433070013  
Status : Not Answered  
Chosen Option : --

Q.15 निम्नलिखित वाक्यांश के लिए सार्थक शब्द का चयन विकल्पों में से कीजिए।  
जिस घटना को वचन से व्यक्त न किया जा सके

- Ans ☒ 1. अविस्मरणीय  
☒ 2. अतुलनीय  
☒ 3. अनिर्वचनीय  
☒ 4. अनुकरणीय

Question ID : 26433069983  
Status : Not Answered  
Chosen Option : --

**Comprehension:**

निम्नलिखित गद्यांश में कुछ शब्दों को हटा दिया गया है। दिए गए विकल्पों की सहायता से रिक्त स्थानों की पूर्ति कीजिए। प्रत्येक संख्या के लिए सबसे उपयुक्त विकल्प का चयन कीजिए।  
मानव सभ्यता वनों में पलकर 1. \_\_\_\_\_ हुई है। आदिमानव का जन्म वहीं हुआ तथा वहां के वृक्षों के फल  
2. \_\_\_\_\_ ही वह बड़ा हुआ। भारतीय 3. \_\_\_\_\_ के अधिकांश महान ग्रन्थ ऋषि मुनियों द्वारा  
4. \_\_\_\_\_ में ही रचे गए। आज की स्थिति यह है कि मनुष्य पेड़-पौधों को नष्ट करने के लिए  
5. \_\_\_\_\_ हो गया है।

SubQuestion No : 16

Q.16 रिक्त स्थान 1 की पूर्ति के लिए सबसे उपयुक्त विकल्प का चयन कीजिए।

- Ans ☒ 1. अमूल्य  
☒ 2. विकसित  
☒ 3. बड़ा  
☒ 4. खत्म

Question ID : 264330110999  
Status : Not Answered  
Chosen Option : --

**Comprehension:**

निम्नलिखित गद्यांश में कुछ शब्दों को हटा दिया गया है। दिए गए विकल्पों की सहायता से रिक्त स्थानों की पूर्ति कीजिए। प्रत्येक संख्या के लिए सबसे उपयुक्त विकल्प का चयन कीजिए।  
मानव सभ्यता वनों में पलकर 1. \_\_\_\_\_ हुई है। आदिमानव का जन्म वहीं हुआ तथा वहां के वृक्षों के फल  
2. \_\_\_\_\_ ही वह बड़ा हुआ। भारतीय 3. \_\_\_\_\_ के अधिकांश महान ग्रन्थ ऋषि मुनियों द्वारा  
4. \_\_\_\_\_ में ही रचे गए। आज की स्थिति यह है कि मनुष्य पेड़-पौधों को नष्ट करने के लिए  
5. \_\_\_\_\_ हो गया है।

SubQuestion No : 17

Q.17 रिक्त स्थान 2 की पूर्ति के लिए सबसे उपयुक्त विकल्प का चयन कीजिए।

- Ans ☒ 1. खाकर  
☒ 2. नुकसानकर  
☒ 3. देखकर  
☒ 4. तोड़कर

Question ID : 264330111000  
Status : Not Answered  
Chosen Option : --



**Comprehension:**

निम्नलिखित गद्यांश में कुछ शब्दों को हटा दिया गया है। दिए गए विकल्पों की सहायता से रिक्त स्थानों की पूर्ति कीजिए। प्रत्येक संख्या के लिए सबसे उपयुक्त विकल्प का चयन कीजिए।  
मानव सभ्यता वनों में पलकर 1. \_\_\_\_\_ हुई है। आदिमानव का जन्म वहीं हुआ तथा वहां के वृक्षों के फल  
2. \_\_\_\_\_ ही वह बड़ा हुआ। भारतीय 3. \_\_\_\_\_ के अधिकांश महान ग्रन्थ ऋषि मुनियों द्वारा  
4. \_\_\_\_\_ में ही रचे गए। आज की स्थिति यह है कि मनुष्य पेड़-पौधों को नष्ट करने के लिए  
5. \_\_\_\_\_ हो गया है।

**SubQuestion No : 18**

**Q.18 रिक्त स्थान 3 की पूर्ति के लिए सबसे उपयुक्त विकल्प का चयन कीजिए।**

- Ans ☒ 1. देख-रेख  
☒ 2. संरक्षण  
☒ 3. संस्कृति  
☒ 4. परिवार

Question ID : 264330111001

Status : Not Answered

Chosen Option : --

**Comprehension:**

निम्नलिखित गद्यांश में कुछ शब्दों को हटा दिया गया है। दिए गए विकल्पों की सहायता से रिक्त स्थानों की पूर्ति कीजिए। प्रत्येक संख्या के लिए सबसे उपयुक्त विकल्प का चयन कीजिए।  
मानव सभ्यता वनों में पलकर 1. \_\_\_\_\_ हुई है। आदिमानव का जन्म वहीं हुआ तथा वहां के वृक्षों के फल  
2. \_\_\_\_\_ ही वह बड़ा हुआ। भारतीय 3. \_\_\_\_\_ के अधिकांश महान ग्रन्थ ऋषि मुनियों द्वारा  
4. \_\_\_\_\_ में ही रचे गए। आज की स्थिति यह है कि मनुष्य पेड़-पौधों को नष्ट करने के लिए  
5. \_\_\_\_\_ हो गया है।

**SubQuestion No : 19**

**Q.19 रिक्त स्थान 4 की पूर्ति के लिए सबसे उपयुक्त विकल्प का चयन कीजिए।**

- Ans ☒ 1. आवश्यक  
☒ 2. तपोवन  
☒ 3. महल  
☒ 4. वातावरण

Question ID : 264330111002

Status : Not Answered

Chosen Option : --

**Comprehension:**

निम्नलिखित गद्यांश में कुछ शब्दों को हटा दिया गया है। दिए गए विकल्पों की सहायता से रिक्त स्थानों की पूर्ति कीजिए। प्रत्येक संख्या के लिए सबसे उपयुक्त विकल्प का चयन कीजिए।  
मानव सभ्यता वनों में पलकर 1. \_\_\_\_\_ हुई है। आदिमानव का जन्म वहीं हुआ तथा वहां के वृक्षों के फल  
2. \_\_\_\_\_ ही वह बड़ा हुआ। भारतीय 3. \_\_\_\_\_ के अधिकांश महान ग्रन्थ ऋषि मुनियों द्वारा  
4. \_\_\_\_\_ में ही रचे गए। आज की स्थिति यह है कि मनुष्य पेड़-पौधों को नष्ट करने के लिए  
5. \_\_\_\_\_ हो गया है।

**SubQuestion No : 20**

**Q.20 रिक्त स्थान 5 की पूर्ति के लिए सबसे उपयुक्त विकल्प का चयन कीजिए।**

- Ans ☒ 1. संभव  
☒ 2. तत्पर  
☒ 3. सहज  
☒ 4. विचरण

Question ID : 264330111003

Status : Not Answered

Chosen Option : --