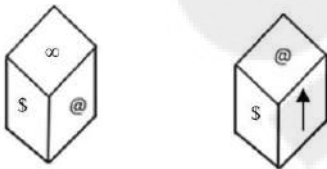


Constable GD in CAPFs SSF Rifleman GD in Assam Rifles and Sepoy in NCB Examination 2022

Roll Number	
Candidate Name	
Venue Name	iON Digital Zone iDZ Austinpatti
Exam Date	12/01/2023
Exam Time	5:15 PM - 6:15 PM
Subject	Constable GD Examination 2022

Section : Part-A-General Intelligence and Reasoning

Q.1 Two different positions of the same dice are shown having symbols- @, Δ, □, \$, ∞ and ↑. Find the symbol on the face opposite the face showing '∞'.



Ans

- 1. @
- 2. Δ
- 3. □
- 4. ↑

Question ID : 26433085515

Status : Answered

Chosen Option : 1

Q.2 Six friends Amit, Bunty, Vaibhav, Harshit, Pulkit and Gagan are sitting around a circular table facing towards the centre. Bunty is the immediate neighbour of Harshit and Vaibhav. Amit is the immediate neighbour of Pulkit and Vaibhav. Who is the immediate neighbour of Amit and Gagan?

- Ans
- 1. Pulkit
 - 2. Bunty
 - 3. Vaibhav
 - 4. Harshit

Question ID : 26433068078

Status : Answered

Chosen Option : 1

Q.3 Which two signs should be interchanged to make the below equation mathematically correct?

$$24 - 8 + 12 \div 48 \times 36 = 23$$

Ans 1. + and ÷

2. - and +

3. × and ÷

4. - and ×

Question ID : 264330114186

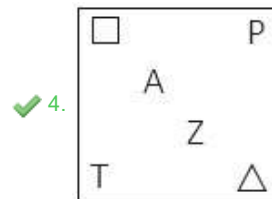
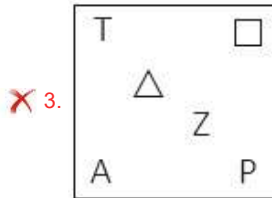
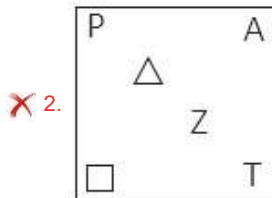
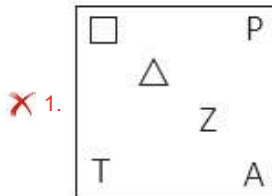
Status : Answered

Chosen Option : 2

Q.4 Which figure should replace the question mark (?) if the series were to be continued?



Ans



Question ID : 26433076625

Status : Answered

Chosen Option : 2

Q.5 In a certain language, EARLY is coded as HDUOB, GAMES is coded as JDPHV. How will INDEX be coded in the same language?

- Ans
- 1. XEDNI
 - 2. LQGHA
 - 3. DNIEX
 - 4. KPGFZ

Question ID : 26433074593
Status : Answered
Chosen Option : 2

Q.6 In this question, three statements are given, followed by two conclusions numbered I and II. Assuming the statements to be true, even if they seem to be at variance with commonly known facts, decide which of the conclusions logically follows/follow from the statements.

Statements:

- All doors are walls.
- All walls are rooms.
- All rooms are flats.

Conclusions:

- I. Some flats are doors.
- II. All walls are flats.

- Ans
- 1. Only conclusion I follows.
 - 2. Neither conclusion I nor II follows.
 - 3. Both conclusions I and II follow.
 - 4. Only conclusion II follows.

Question ID : 26433070382
Status : Answered
Chosen Option : 4

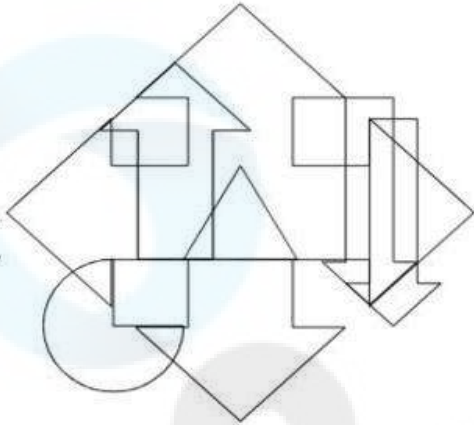
Q.7 Select the set in which the numbers are related in the same way as are the numbers of the following set.

(NOTE : Operations should be performed on the whole numbers, without breaking down the numbers into its constituent digits. E.g. 13 – Operations on 13 such as adding /subtracting/multiplying etc. to 13 can be performed. Breaking down 13 into 1 and 3 and then performing mathematical operations on 1 and 3 is NOT allowed)
(360, 65, 25)
(216, 44, 20)

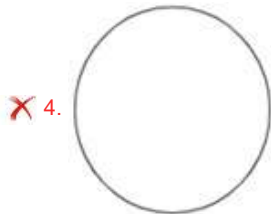
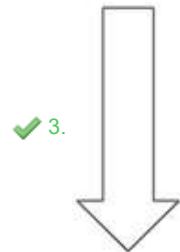
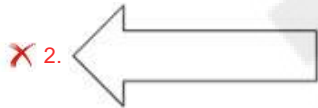
- Ans
- 1. (179, 66, 30)
 - 2. (80, 19, 9)
 - 3. (190, 35, 17)
 - 4. (198, 35, 13)

Question ID : 26433076476
Status : Not Attempted and Marked For Review
Chosen Option : --

Q.8 Select the option figure which is embedded in the given figure. (Rotation is NOT allowed)



Ans



Question ID : 26433085755

Status : Answered

Chosen Option : 3

Q.9 In a certain code language, 'live life happily' is coded as '447', 'everyone is here' is coded as '824' and 'be grateful' is coded as '28'. How will 'count your blessings' be coded in that language?

Ans ✗ 1. 658

✗ 2. 856

✓ 3. 549

✗ 4. 459

Question ID : 26433067780

Status : Marked For Review

Chosen Option : 1

Q.10 Which of the following numbers will replace the question mark (?) in the given series?
4, 7, 12, 19, 28, 39, 52, 67, ?

- Ans
- 1. 83
 - 2. 84
 - 3. 82
 - 4. 81

Question ID : 26433069052
Status : Answered
Chosen Option : 2

Q.11 Select the letter-cluster from among the given options that can replace the question mark (?) in the following series.
WBL, DIS, KPZ, RWG, ?

- Ans
- 1. YEM
 - 2. ZDN
 - 3. XDN
 - 4. YDN

Question ID : 26433079033
Status : Answered
Chosen Option : 4

Q.12 Which two signs should be interchanged to make the below equation mathematically correct?

$$25 + 200 \div 8 \times 16 - 48 = 77$$

- Ans
- 1. ÷ and ×
 - 2. ÷ and –
 - 3. – and +
 - 4. × and –

Question ID : 264330117552
Status : Not Attempted and Marked For Review
Chosen Option : --

Q.13 Which of the following numbers will replace the question mark (?) in the given series?
4, 24, 30, 180, 186, ?

- Ans
- 1. 192
 - 2. 1118
 - 3. 1110
 - 4. 1116

Question ID : 26433087034
Status : Not Answered
Chosen Option : --

Q.14 Select the option that is related to the third word in the same way as the second word is related to the first word. (The words must be considered as meaningful English words and must not be related to each other based on the number of letters/number of consonants/vowels in the word)
Colour : Red :: Vehicle : ?

- Ans 1. Truck
 2. Road
 3. Petrol
 4. Tyre

Question ID : 26433082936
Status : Answered
Chosen Option : 4

Q.15 'A ^ P' means 'A is the husband of P'.
'A % P' means 'A is the father of P'.
'A = P' means 'A is the sister of P'.
'A & P' means 'A is the daughter of P'.
If F & G = H ^ J, then which of the following is correct?

- Ans 1. H and F are siblings.
 2. F is the daughter of J.
 3. G is the mother of J.
 4. J is the wife of G's brother.

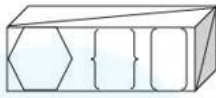
Question ID : 26433086995
Status : Answered
Chosen Option : 4

Q.16 V, W, X, Y, Z, A, B and C were sitting around a square table facing the centre. Some of these were sitting at corners and some were sitting at exact centre of the sides. C was to the immediate right of W. B was third to the left of Z. A was the immediate neighbour of X and C. Z, not at any corner, was the immediate neighbour of W and Y. Who among the following was sitting third to the right of A?

- Ans 1. B
 2. Y
 3. V
 4. Z

Question ID : 26433087012
Status : Not Answered
Chosen Option : --

Q.17 Select the option that is embedded in the given figure (rotation is NOT allowed).



Ans

✗ 1.



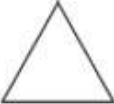
✓ 2.



✗ 3.



✗ 4.



Question ID : 26433082895

Status : Answered

Chosen Option : 2

Q.18 Select the option that is related to the fifth letter-cluster in the same way as the second letter-cluster is related to the first letter-cluster and the fourth letter-cluster is related to the third letter-cluster.

FALLEN : TJPOCG :: DANGER : XJKQCE :: CABLES : ?

Ans

✗ 1. YJPEBD

✓ 2. YJPECD

✗ 3. DCEPJY

✗ 4. ZJPECD

Question ID : 26433057250

Status : Answered

Chosen Option : 2

Q.19 Which of the following letter-clusters will replace the question mark (?) and complete the following letter-cluster series?

UH, BD, IA, PY, ?

Ans

✗ 1. VX

✗ 2. WW

✗ 3. WY

✓ 4. WX

Question ID : 26433067288

Status : Answered

Chosen Option : 4

Q.20 Which option represents the correct order of the given words as they would appear in the English dictionary?

- 1 Pillow
- 2 Pile
- 3 Pint
- 4 Picked
- 5 Pickle

- Ans
- 1. 5,4,2,1,3
 - 2. 4,5,2,1,3
 - 3. 2,3,4,1,5
 - 4. 2,1,3,5,4

Question ID : 26433069274
Status : Answered
Chosen Option : 2

Section : Part-B-General Knowledge and General awareness

Q.1 Which among the following political leaders succeeded Raghav Chadha to become Member of Legislative Assembly from Rajinder Nagar, Delhi in June 2022?

- Ans
- 1. Sanjeev Jha
 - 2. Manoj Tiwari
 - 3. Durgesh Pathak
 - 4. Adarsh Shastri

Question ID : 264330114905
Status : Not Answered
Chosen Option : --

Q.2 Which Part of the Constitution of India contains within it the powers and functions of the Union Public Service Commission?

- Ans
- 1. Part XVII
 - 2. Part XV
 - 3. Part XVI
 - 4. Part XIV

Question ID : 26433074900
Status : Not Answered
Chosen Option : --

Q.3 RUSA , is the central government's contribution to further the promise held by the rich of India's state universities. RUSA stands for:

- Ans
- 1. Rajiv Gandhi Uchcharat Shiksha Abhiyan
 - 2. Rashtriya Uchcharat Seekh Abhiyan
 - 3. Rashtriya Unchi Shiksha Abhiyan
 - 4. Rashtriya Uchcharat Shiksha Abhiyan

Question ID : 264330116162
Status : Not Answered
Chosen Option : --

Q.4 The famous Losoong festival is celebrated in which of the following states?

- Ans
- 1. Assam
 - 2. Sikkim
 - 3. Manipur
 - 4. Rajasthan

Question ID : 264330115091
Status : Not Answered
Chosen Option : --

Q.5 How many sports were there in the Asian Games 2018?

- Ans
- 1. 41
 - 2. 47
 - 3. 55
 - 4. 36

Question ID : 264330115957
Status : Not Answered
Chosen Option : --

Q.6 During the Chola period, *muvendavelan* and *araiyar* were titles of _____.

- Ans
- 1. sons of king
 - 2. commander of army
 - 3. rich landowners
 - 4. ministers of king

Question ID : 26433089853
Status : Answered
Chosen Option : 1

Q.7 Guru Pankaj Charan Das is a famous proponent of which Indian classical Dance?

- Ans
- 1. Manipuri
 - 2. Odissi
 - 3. Mohiniyattam
 - 4. Kathak

Question ID : 26433066532
Status : Answered
Chosen Option : 2

Q.8 In India, it is the only industry in the country, which is self-reliant and complete in the value chain i.e., from raw material to the highest value added products. Which industry is being spoken about here?

- Ans**
- 1. Small Scale Industries
 - 2. Iron and Steel Industry
 - 3. Private Sector Industries
 - 4. Textile Industry

Question ID : **264330115586**
Status : **Not Answered**
Chosen Option : --

Q.9 Who among the following was the founder of the 'Khudai Khidmatgars' non-violent movement?

- Ans**
- 1. Syed Ahmad Khan
 - 2. Abul Kalam Azad
 - 3. Khan Abdul Ghaffar Khan
 - 4. Mohammad Ali Jinnah

Question ID : **26433090590**
Status : **Not Answered**
Chosen Option : --

Q.10 Cyclostomes are jawless _____.

- Ans**
- 1. vertebrates
 - 2. protochordates
 - 3. mollusca
 - 4. arthropoda

Question ID : **264330115187**
Status : **Not Answered**
Chosen Option : --

Q.11 The first complete census of an Indian city was conducted in 1830 by _____.

- Ans**
- 1. James Rennell
 - 2. Henry Walter
 - 3. John Graunt
 - 4. Eratosthenes

Question ID : **264330116025**
Status : **Not Answered**
Chosen Option : --

Q.12 National development council (NDC) was set up in _____ in India.

- Ans
- 1. 1949
 - 2. 1960
 - 3. 1952
 - 4. 1947

Question ID : 264330115371
Status : Not Answered
Chosen Option : --

Q.13 In November 2021, which of the following dancer won a Padma Shri for the contribution in Arts?

- Ans
- 1. Sumitra Mahajan
 - 2. Manjamma Jogati
 - 3. Chutni Devi
 - 4. Shanti Devi

Question ID : 264330115816
Status : Not Answered
Chosen Option : --

Q.14 Whose tenure has been extended by one year as the Chief of Research and Analysis Wing (R&AW) in June 2022?

- Ans
- 1. Samant Goel
 - 2. Rajinder Khanna
 - 3. Arvinda Kumar
 - 4. Rameshwar Nath Kao

Question ID : 264330115042
Status : Answered
Chosen Option : 1

Q.15 Which of the following is correct regarding Personal Disposable Income?

- Ans
- 1. Personal Disposable Income \equiv Personal Income + Personal tax payments – Non-tax payments
 - 2. Personal Disposable Income \equiv Personal Income – Personal tax payments – Non-tax payments
 - 3. Personal Disposable Income \equiv Personal Income – Personal tax payments + Non-tax payments
 - 4. Personal Disposable Income \equiv Personal Income + Personal tax payments + Non-tax payments

Question ID : 264330115339
Status : Not Answered
Chosen Option : --

Q.16 Which among the following elements has the least atomic radius?

- Ans
- 1. Li
 - 2. Be
 - 3. O
 - 4. B

Question ID : 264330115153
Status : Not Answered
Chosen Option : --

Q.17 In which of the following International Olympic Committee's session, Tomas Bach's Olympic Agenda 2020+5 was discussed?

- Ans
- 1. 137th Session held virtually
 - 2. 138th Session held in Tokyo
 - 3. 135th Session held in Lausanne
 - 4. 136th Session held virtually

Question ID : 26433086724
Status : Not Answered
Chosen Option : --

Q.18 Which water body surrounds India in the west?

- Ans
- 1. Arabian Sea
 - 2. Pacific Ocean
 - 3. Bay of Bengal
 - 4. Indian Ocean

Question ID : 264330116010
Status : Not Answered
Chosen Option : --

Q.19 The objective of the first five year plan was to _____.

- Ans
- 1. promote more education
 - 2. initiate a process of development.
 - 3. develop agriculture
 - 4. increase the GDP of India.

Question ID : 264330116115
Status : Not Answered
Chosen Option : --

Q.20 In the Indian constitution, Right to equality has _____ articles in it.

- Ans
- 1. 5
 - 2. 4
 - 3. 3
 - 4. 2

Question ID : 264330115640
Status : Not Answered
Chosen Option : --

Section : Part-C-Elementary Mathematics

Q.1 A train runs at a speed of 90 km/h in the first 10 minutes and 60 km/h in next 25 minutes and 15 km/h in last 4 minutes. What is the average speed of the train?

- Ans
- 1. $51 \frac{1}{11}$ km/h
 - 2. $61 \frac{11}{13}$ km/h
 - 3. $63 \frac{1}{13}$ km/h
 - 4. $65 \frac{5}{13}$ km/h

Question ID : 26433091504
Status : Not Answered
Chosen Option : --

Q.2 If 125 identical small spheres are made from a solid sphere of diameter 15 cm, then what is the surface area of each of the small sphere?

- Ans
- 1. $4 \pi \text{ cm}^2$
 - 2. $36 \pi \text{ cm}^2$
 - 3. $12 \pi \text{ cm}^2$
 - 4. $9 \pi \text{ cm}^2$

Question ID : 26433076248
Status : Not Answered
Chosen Option : --

Q.3 A salesman buys 15 articles for Rs.10 and sells 10 articles for Rs.15. Determine the percentage profit earned by the salesman.

- Ans
- 1. 125%
 - 2. 100%
 - 3. 225%
 - 4. 150%

Question ID : 26433071308
Status : Answered
Chosen Option : 4

Q.4 Sohan and Rohan together can do a piece of work in 18 days. If Sohan alone can do the same work in 27 days, then how many days Rohan alone takes to complete the same work?

- Ans
- 1. 72
 - 2. 66
 - 3. 54
 - 4. 48

Question ID : 26433075702
Status : Answered
Chosen Option : 3

Q.5 If $A : B = 5 : 8$ and $B : C = 4 : 7$, then find the value of $A : B : C$.

- Ans
- 1. 7 : 8 : 12
 - 2. 4 : 9 : 15
 - 3. 5 : 8 : 14
 - 4. 5 : 8 : 10

Question ID : 26433082718
Status : Answered
Chosen Option : 3

Q.6 The average of the first four prime numbers that are odd is:

- Ans
- 1. 4.6
 - 2. 4
 - 3. 6
 - 4. 6.5

Question ID : 26433080098
Status : Not Attempted and Marked For Review
Chosen Option : --

Q.7 The value of the following expression is:

$$197 - \left[\frac{1}{9} \{42 + (56 - 8 + 9)\} + 108 \right]$$

- Ans
- 1. 78
 - 2. 23
 - 3. 74
 - 4. 80

Question ID : 26433076321
Status : Answered
Chosen Option : 3

Q.8 A, B, and C can do a piece of work in 8, 4, and 16 days respectively. How many days will A take to complete the entire work if A is assisted by B and C both on every second day?

- Ans 1. $26/7$ days
 2. $54/11$ days
 3. $7/8$ days
 4. $3/4$ days

Question ID : 264330116846
Status : Not Answered
Chosen Option : --

Q.9 Which of the following numbers is NOT divisible by 16?

- Ans 1. 16826
 2. 17776
 3. 5168
 4. 18016

Question ID : 26433091891
Status : Answered
Chosen Option : 1

Q.10 In an election between two candidates, One candidate got 48% of the total valid votes. 18% of the votes were invalid. If the total number of votes was 17500, then what was the number of valid votes the other candidate got?

- Ans 1. 7512
 2. 14350
 3. 7462
 4. 8750

Question ID : 26433082595
Status : Answered
Chosen Option : 2

Q.11 A loan of ₹1,50,000 is availed with compound interest rate of 10% per annum for two years compounded annually. It is to be paid in equal yearly instalments; and the instalment is to be paid at the end of each year. The value of the equal yearly instalment is : (Rounded off to two places of decimal)

- Ans 1. ₹86,428.57
 2. ₹84,400.44
 3. ₹80,000.24
 4. ₹82,208.67

Question ID : 26433081722
Status : Not Answered
Chosen Option : --

Q.12 A trader gains 12% after allowing a discount of 20% on the marked price of an article. Find his profit percentage if the article is sold at marked price allowing no discount.

- Ans
- 1. 40%
 - 2. 35%
 - 3. 38%
 - 4. 42%

Question ID : 26433066311
Status : Not Answered
Chosen Option : --

Q.13 A triangle has two equal sides, and the third side is 1.5 times any of these sides. If the perimeter of the triangle is 14 units, then the area of the triangle is _____ square units.

- Ans
- 1. $3\sqrt{3}$
 - 2. $3\sqrt{7}$
 - 3. $4\sqrt{7}$
 - 4. $\frac{3}{2}\sqrt{7}$

Question ID : 26433071366
Status : Not Answered
Chosen Option : --

Q.14 In an election between three candidates A, B and C, 80% of the registered voters voted and all the votes were valid. Candidate B got 50% less votes than A, and the difference between the number of votes secured by B and C was 10000. If B got 10% more votes than C, then the number of voters registered on the voting list is:

- Ans
- 1. 175000
 - 2. 430000
 - 3. 220000
 - 4. 537500

Question ID : 26433079922
Status : Not Answered
Chosen Option : --

Q.15 A man purchased two items at the same price and sold one at a profit of 10% and the other at a loss of 5%. If the difference between the two selling prices is ₹60, then what is the sum of cost price of the two items?

- Ans
- 1. ₹900
 - 2. ₹700
 - 3. ₹600
 - 4. ₹800

Question ID : 26433074279
Status : Answered
Chosen Option : 4

Q.16 Two trains having lengths 550 m and 650 m are running parallel to each other in opposite directions at speeds of 68 km/h and 40 km/h, respectively. In how much time (in seconds) they will cross each other?

Ans 1. 40

2. 30

3. 45

4. 35

Question ID : 26433075563

Status : Not Answered

Chosen Option : --

Q.17 Without stoppages a train travels a certain distance with an average speed of 75 km/h and with stoppages it covers the same distance with an average speed of 65 km/h. How many minutes per hour does the train stop?

Ans 1. 10 min

2. 7 min

3. 9 min

4. 8 min

Question ID : 26433066316

Status : Answered

Chosen Option : 4

Q.18 When the same number is subtracted from each of 7, 9, 11 and 15, the resulting numbers are in proportion. The number subtracted is:

Ans 1. 4

2. 5

3. 2

4. 3

Question ID : 26433082390

Status : Answered

Chosen Option : 4

Q.19 Lara deposited Rs.8,000 in a bank, which pays her compound interest at the rate of 10% per annum compounded half-yearly. What is the amount she will receive after 18 months?

Ans 1. Rs.9,162

2. Rs.9,616

3. Rs.9,621

4. Rs.9,261

Question ID : 26433065092

Status : Not Answered

Chosen Option : --

Q.20 X was offering two successive discounts of 12 percent and 8 percent on an item while Y was offering flat 20 percent discount on the same item. What is the difference between overall discount given by X and Y?

- Ans 1. 0.96 percent
 2. 0.90 percent
 3. 0.92 percent
 4. 0.94 percent

Question ID : 264330116731
Status : Not Answered
Chosen Option : --

Section : Part-D-English

Q.1 Select the most appropriate option that can substitute the underlined segment in the given sentence.

How she managed of escaping from the situation was inexplicable.

- Ans 1. managed to escape of
 2. managed to escape on
 3. managed to escape from
 4. managing of escape

Question ID : 26433091963
Status : Answered
Chosen Option : 3

Q.2 Select the most appropriate meaning of the given idiom.

Wild goose chase

- Ans 1. To do something pointless
 2. To hunt wild animals
 3. Going on world tour
 4. Competing fiercely

Question ID : 26433072359
Status : Not Answered
Chosen Option : --

Q.3 Select the most appropriate option to fill in the blank.

As he opened the window the sun _____ directly fell on his face.

- Ans 1. rays
 2. raze
 3. race
 4. raise

Question ID : 26433084715
Status : Answered
Chosen Option : 1

Q.4 Select the most appropriate synonym of the given word.

Auspicious

- Ans 1. Antique
 2. Fortunate
 3. Illogical
 4. Despairing

Question ID : 26433073433
Status : Not Answered
Chosen Option : --

Q.5 Select the most appropriate option that can substitute the underlined segment in the given sentence.

Mr. Advani was happy to push the boat out for his daughter's wedding.

- Ans 1. spend a lot of money
 2. spend less money
 3. avoid risk
 4. take it easy

Question ID : 26433071894
Status : Not Answered
Chosen Option : --

Q.6 Select the most appropriate option to fill in the blank.

They enjoyed _____ the sun rising from the hills.

- Ans 1. in seeing
 2. to visualise
 3. watching
 4. blinking at

Question ID : 26433073406
Status : Answered
Chosen Option : 3

Q.7 Select the most appropriate synonym of the capitalised word in the given sentence.

Isabel listened with extreme respect to this ADMONITION.

- Ans 1. Insult
 2. Prayer
 3. Council
 4. Counsel

Question ID : 26433088208
Status : Not Answered
Chosen Option : --

Q.8 Select the correct pair of words for the blanks in the given sentence.

I will _____ a new purse from the shop on the _____ pass road.

- Ans
- 1. by; bye
 - 2. bye; bye
 - 3. buy; by
 - 4. bye; buy

Question ID : 26433060544
Status : Answered
Chosen Option : 3

Q.9 Fill in the blank in the following sentence using the ANTONYM of the underlined word.

We believe that this incident has been exaggerated so _____ it.

- Ans
- 1. ignore
 - 2. condemn
 - 3. underwrite
 - 4. understate

Question ID : 26433088827
Status : Answered
Chosen Option : 1

Q.10 The following sentence has been split into four segments. Identify the segment that contains a grammatical error.

I can't say for sure/ what make him/ think of such an/ outrageously absurd idea.

- Ans
- 1. I can't say for sure
 - 2. what make him
 - 3. think of such an
 - 4. outrageously absurd idea

Question ID : 264330114511
Status : Answered
Chosen Option : 1

Q.11 Select the most appropriate ANTONYM of the given word.

Curtail

- Ans
- 1. Seize
 - 2. Amplify
 - 3. Restrict
 - 4. Deviate

Question ID : 26433071973
Status : Not Answered
Chosen Option : --

Q.12 Select the most appropriate option that can substitute the underlined segment in the given sentence.

Over 80% of India's transportation fuel are exchanged.

- Ans
- 1. is endangered
 - 2. are vanished
 - 3. is imported
 - 4. have vanished

Question ID : 26433089799
Status : Answered
Chosen Option : 1

Q.13 Identify the correctly spelt sentence.

- Ans
- 1. I saw the catalogue of D Décor in Capital Mall yesterday.
 - 2. I saw the cattalogue of D Décor in Capital Mall yesterday.
 - 3. I saw the catalogue of D Décor in Capital Mall yesterday.
 - 4. I saw the catalogoue of D Décor in Capital Mall yesterday.

Question ID : 26433072832
Status : Answered
Chosen Option : 1

Q.14 The sentence given below has one misspelt word. Spot the INCORRECTLY spelt word and select its correct spelling.

The aproximate value of my property is ₹2 lakh.

- Ans
- 1. Approximate
 - 2. Aproxemate
 - 3. Approximate
 - 4. Appraximate

Question ID : 26433073543
Status : Answered
Chosen Option : 1

Q.15 Select the most appropriate ANTONYM of the given word.
Outgoing

- Ans
- 1. Extravagant
 - 2. Eccentric
 - 3. Introverted
 - 4. Rational

Question ID : 26433066083
Status : Not Answered
Chosen Option : --

Comprehension:

In the following passage, some words have been deleted. Read the passage carefully and select the most appropriate option to fill in each blank.

Miss Caroline was no more (1) _____ twenty-one. She had bright auburn hair, pink (2) _____, and wore crimson finger-nail polish. She also (3) _____ high-heeled pumps and a red-and-white (4) _____ dress. She looked and smelled (5) _____ a peppermint drop.

SubQuestion No : 16

Q.16 Select the most appropriate option to fill in blank number 1.

- Ans
- 1. then
 - 2. but
 - 3. than
 - 4. the

Question ID : 26433061540

Status : Answered

Chosen Option : 3

Comprehension:

In the following passage, some words have been deleted. Read the passage carefully and select the most appropriate option to fill in each blank.

Miss Caroline was no more (1) _____ twenty-one. She had bright auburn hair, pink (2) _____, and wore crimson finger-nail polish. She also (3) _____ high-heeled pumps and a red-and-white (4) _____ dress. She looked and smelled (5) _____ a peppermint drop.

SubQuestion No : 17

Q.17 Select the most appropriate option to fill in blank number 2.

- Ans
- 1. ears
 - 2. eyes
 - 3. cheeks
 - 4. eyebrows

Question ID : 26433061541

Status : Answered

Chosen Option : 2

Comprehension:

In the following passage, some words have been deleted. Read the passage carefully and select the most appropriate option to fill in each blank.

Miss Caroline was no more (1)_____ twenty-one. She had bright auburn hair, pink (2)_____, and wore crimson finger-nail polish. She also (3)_____ high-heeled pumps and a red-and-white (4)_____ dress. She looked and smelled (5)_____ a peppermint drop.

SubQuestion No : 18

Q.18 Select the most appropriate option to fill in blank number 3.

- Ans 1. wore
 2. worn
 3. wearing
 4. put

Question ID : 26433061542

Status : Answered

Chosen Option : 3

Comprehension:

In the following passage, some words have been deleted. Read the passage carefully and select the most appropriate option to fill in each blank.

Miss Caroline was no more (1)_____ twenty-one. She had bright auburn hair, pink (2)_____, and wore crimson finger-nail polish. She also (3)_____ high-heeled pumps and a red-and-white (4)_____ dress. She looked and smelled (5)_____ a peppermint drop.

SubQuestion No : 19

Q.19 Select the most appropriate option to fill in blank number 4.

- Ans 1. striped
 2. stripped
 3. stepped
 4. stapled

Question ID : 26433061543

Status : Answered

Chosen Option : 2

Comprehension:

In the following passage, some words have been deleted. Read the passage carefully and select the most appropriate option to fill in each blank.

Miss Caroline was no more (1)_____ twenty-one. She had bright auburn hair, pink (2)_____, and wore crimson finger-nail polish. She also (3)_____ high-heeled pumps and a red-and-white (4)_____ dress. She looked and smelled (5)_____ a peppermint drop.

SubQuestion No : 20**Q.20 Select the most appropriate option to fill in blank number 5.**

- Ans
- 1. liked
 - 2. as
 - 3. like
 - 4. as if

Question ID : 26433061544

Status : Answered

Chosen Option : 3

Section : Part-D-Hindi

**Q.1 निम्नलिखित वाक्यांश के लिए एक सार्थक शब्द चुनिए।
जिसे बुलाया न गया हो**

- Ans
- 1. अमानत
 - 2. अगवानी
 - 3. अदेय
 - 4. अनाहूत

Question ID : 26433062730

Status : Not Answered

Chosen Option : --

Q.2 निम्नलिखित वाक्यों में कौन-सा अशुद्ध वाक्य है?

- Ans
- 1. शर्माजी बुलाए हैं।
 - 2. उन्होंने अफवाह फैलाई।
 - 3. मुझे मत मारो।
 - 4. बुराई से बचो।

Question ID : 26433079227

Status : Not Answered

Chosen Option : --

Q.3 निम्नलिखित में से कौन सा 'पत्र' का अर्थ नहीं है?

- Ans
- 1. मुख्य
 - 2. पत्ता
 - 3. चिट्ठी
 - 4. पत्रिका

Question ID : 26433080942

Status : Not Answered

Chosen Option : --

Q.4 वर्तनी की दृष्टि से दिए गए वाक्य के अशुद्ध भाग का चयन कीजिए-
जब तक परीक्षा का दिन नहीं आया था तब तक उसने एक अक्षर नहीं पढ़ा था।

- Ans
- 1. तब तक उसने एक
 - 2. जब तक परीक्षा का
 - 3. दिन नहीं आया था
 - 4. अक्षर नहीं पढ़ा था।

Question ID : 26433062886
Status : Not Answered
Chosen Option : --

Q.5 निम्नलिखित में से कौन सा शब्द अनेकार्थी शब्द है?

- Ans
- 1. अंक
 - 2. दोस्त
 - 3. परिवार
 - 4. कबूतर

Question ID : 26433091322
Status : Not Answered
Chosen Option : --

Q.6 'इतना आलस्यता ठीक नहीं है।'
उपरोक्त वाक्य का शुद्ध रूप क्या होगा?

- Ans
- 1. इतनी आलस्यता ठीक नहीं है।
 - 2. इतनी आलस्य नहीं है ठीक।
 - 3. इतना आलस्यता नहीं है ठीक।
 - 4. इतना आलस्य ठीक नहीं है।

Question ID : 26433066993
Status : Not Answered
Chosen Option : --

Q.7 'निर्धन बालिका भूख से _____ थी।'
उपरोक्त वाक्य के रिक्त स्थान की पूर्ति उचित शब्द के चयन द्वारा कीजिए।

- Ans
- 1. आतुर
 - 2. आकुल
 - 3. व्याकुल
 - 4. हकलान

Question ID : 26433080900
Status : Not Answered
Chosen Option : --

Q.8 निम्नलिखित में से कौन-सा वाक्य संज्ञा के प्रयोग की दृष्टि से शुद्ध है?

- Ans
- 1. सुमन के अनुसार शत्रुपण अच्छा नहीं है।
 - 2. सुमन के अनुसार शत्रुता अच्छी नहीं है।
 - 3. सुमन के अनुसार शत्रुत्व अच्छे नहीं है।
 - 4. सुमन के अनुसार शत्रु अच्छी नहीं है।

Question ID : 26433066957
Status : Not Answered
Chosen Option : --

Q.9 प्रशंसनीय का विलोम होगा-

- Ans
- 1. स्तुत्य
 - 2. निन्दनीय
 - 3. अभिनन्दनीय
 - 4. अनिन्दनीय

Question ID : 26433062920
Status : Not Answered
Chosen Option : --

Q.10 'जो पहरा देता है' वाक्यांश के लिए सार्थक शब्द क्या होगा?

- Ans
- 1. सेवक
 - 2. प्रहरी
 - 3. प्रत्यागत
 - 4. रक्षक

Question ID : 26433065865
Status : Not Answered
Chosen Option : --

Q.11 दिए गए विकल्पों में से कौन सा शब्द निम्नलिखित वाक्य में रेखांकित शब्द का पर्यायवाची नहीं है-
बच्चे को बच्चा बनकर ही समझ सकते हैं।

- Ans
- 1. शिशु
 - 2. बाल
 - 3. बालक
 - 4. वायु

Question ID : 26433091337
Status : Not Answered
Chosen Option : --

Q.12 निम्नलिखित वाक्य के रिक्त स्थान में सबसे उपयुक्त मुहावरा क्या होगा?
'वह बिना कारण ही _____ है'

- Ans
- 1. मुँह फुला लेता
 - 2. बाल-बाल बचना
 - 3. मक्खी मारता
 - 4. भूत सवार होता

Question ID : 26433066725
Status : Not Answered
Chosen Option : --

Q.13 मिश्र वाक्य - 'जब तुम मेरे घर आये थे तब चार बजा था।' निम्नलिखित विकल्पों में से इस वाक्य के लिए कौन सा एक उचित सरल वाक्य होगा?

- Ans
- 1. घर आये तुम चार बजे मेरे थे।
 - 2. घर चार बजे तुम मेरे आये थे।
 - 3. चार बजा जब तुम मेरे घर आये थे तब था।
 - 4. तुम चार बजे मेरे घर आये थे।

Question ID : 26433062436
Status : Not Answered
Chosen Option : --

Q.14 निम्नलिखित वाक्य के रिक्त स्थान में सबसे उपयुक्त मुहावरा क्या होगा?
'जेठ की गर्मी _____ जैसी होती है'

- Ans
- 1. ठंडी जैसी
 - 2. अंगार बरसने जैसी
 - 3. अंधकार जैसी
 - 4. सर्दी जैसी

Question ID : 26433066731
Status : Not Answered
Chosen Option : --

Q.15 'कुछ लाभ पाने की चाह' वाक्यांश के लिए एक शब्द क्या होगा?

- Ans
- 1. पिपासा
 - 2. प्रतीक्षा
 - 3. लिप्सा
 - 4. बुभुक्षा

Question ID : 26433065730
Status : Not Answered
Chosen Option : --

Comprehension:

निम्नलिखित गद्यांश में कुछ शब्दों को हटा दिया गया है। दिए गए विकल्पों की सहायता से रिक्त स्थानों की पूर्ति कीजिए। प्रत्येक संख्या के लिए सबसे उपयुक्त विकल्प का चयन करें।
हम सभी को इस दुनिया में सफल होने के लिए हर जगह पर 1. _____ देनी पड़ती है। परीक्षाओं की 2. _____ बहुत पुरानी है। जीवन के लगभग 3. _____ में हम परीक्षाओं का सामना करते हैं। परीक्षाएं मौखिक या लिखित हो सकती हैं। हमलोग अपने विद्यालयों और महाविद्यालयों की परीक्षाओं में बैठते हैं। हमलोग अच्छी 4. _____ पाने के लिए भी परीक्षाओं में बैठते हैं। जैसे-जैसे हम ऊंची कक्षाओं में पहुंचते हैं, परीक्षाओं की 5. _____ का स्तर भी बढ़ जाता है।

SubQuestion No : 16

Q.16 रिक्त स्थान 1 की पूर्ति के लिए सबसे उपयुक्त विकल्प का चयन करें।

- Ans
- 1. रिश्त
 - 2. आधार कार्ड
 - 3. परीक्षा
 - 4. जैसे

Question ID : 264330110927

Status : Not Answered

Chosen Option : --

Comprehension:

निम्नलिखित गद्यांश में कुछ शब्दों को हटा दिया गया है। दिए गए विकल्पों की सहायता से रिक्त स्थानों की पूर्ति कीजिए। प्रत्येक संख्या के लिए सबसे उपयुक्त विकल्प का चयन करें।
हम सभी को इस दुनिया में सफल होने के लिए हर जगह पर 1. _____ देनी पड़ती है। परीक्षाओं की 2. _____ बहुत पुरानी है। जीवन के लगभग 3. _____ में हम परीक्षाओं का सामना करते हैं। परीक्षाएं मौखिक या लिखित हो सकती हैं। हमलोग अपने विद्यालयों और महाविद्यालयों की परीक्षाओं में बैठते हैं। हमलोग अच्छी 4. _____ पाने के लिए भी परीक्षाओं में बैठते हैं। जैसे-जैसे हम ऊंची कक्षाओं में पहुंचते हैं, परीक्षाओं की 5. _____ का स्तर भी बढ़ जाता है।

SubQuestion No : 17

Q.17 रिक्त स्थान 2 की पूर्ति के लिए सबसे उपयुक्त विकल्प का चयन करें।

- Ans
- 1. अभिप्राय
 - 2. धारणा
 - 3. मामला
 - 4. मनसा

Question ID : 264330110928

Status : Not Answered

Chosen Option : --

Comprehension:

निम्नलिखित गद्यांश में कुछ शब्दों को हटा दिया गया है। दिए गए विकल्पों की सहायता से रिक्त स्थानों की पूर्ति कीजिए। प्रत्येक संख्या के लिए सबसे उपयुक्त विकल्प का चयन करें।
हम सभी को इस दुनिया में सफल होने के लिए हर जगह पर 1. _____ देनी पड़ती है। परीक्षाओं की 2. _____ बहुत पुरानी है। जीवन के लगभग 3. _____ में हम परीक्षाओं का सामना करते हैं। परीक्षाएं मौखिक या लिखित हो सकती हैं। हमलोग अपने विद्यालयों और महाविद्यालयों की परीक्षाओं में बैठते हैं। हमलोग अच्छी 4. _____ पाने के लिए भी परीक्षाओं में बैठते हैं। जैसे-जैसे हम ऊंची कक्षाओं में पहुंचते हैं, परीक्षाओं की 5. _____ का स्तर भी बढ़ जाता है।

SubQuestion No : 18

Q.18 रिक्त स्थान 3 की पूर्ति के लिए सबसे उपयुक्त विकल्प का चयन करें।

- Ans
- 1. अपने क्षेत्र
 - 2. कुछ क्षेत्र
 - 3. हर क्षेत्र
 - 4. प्राथमिक क्षेत्र

Question ID : 264330110929

Status : Not Answered

Chosen Option : --

Comprehension:

निम्नलिखित गद्यांश में कुछ शब्दों को हटा दिया गया है। दिए गए विकल्पों की सहायता से रिक्त स्थानों की पूर्ति कीजिए। प्रत्येक संख्या के लिए सबसे उपयुक्त विकल्प का चयन करें।
हम सभी को इस दुनिया में सफल होने के लिए हर जगह पर 1. _____ देनी पड़ती है। परीक्षाओं की 2. _____ बहुत पुरानी है। जीवन के लगभग 3. _____ में हम परीक्षाओं का सामना करते हैं। परीक्षाएं मौखिक या लिखित हो सकती हैं। हमलोग अपने विद्यालयों और महाविद्यालयों की परीक्षाओं में बैठते हैं। हमलोग अच्छी 4. _____ पाने के लिए भी परीक्षाओं में बैठते हैं। जैसे-जैसे हम ऊंची कक्षाओं में पहुंचते हैं, परीक्षाओं की 5. _____ का स्तर भी बढ़ जाता है।

SubQuestion No : 19

Q.19 रिक्त स्थान 4 की पूर्ति के लिए सबसे उपयुक्त विकल्प का चयन करें।

- Ans
- 1. गाड़ी
 - 2. परिवार
 - 3. घर
 - 4. नौकरी

Question ID : 264330110930

Status : Not Answered

Chosen Option : --

Comprehension:

निम्नलिखित गद्यांश में कुछ शब्दों को हटा दिया गया है। दिए गए विकल्पों की सहायता से रिक्त स्थानों की पूर्ति कीजिए। प्रत्येक संख्या के लिए सबसे उपयुक्त विकल्प का चयन करें।

हम सभी को इस दुनिया में सफल होने के लिए हर जगह पर 1. _____ देनी पड़ती है। परीक्षाओं की 2. _____ बहुत पुरानी है। जीवन के लगभग 3. _____ में हम परीक्षाओं का सामना करते हैं। परीक्षाएं मौखिक या लिखित हो सकती हैं। हमलोग अपने विद्यालयों और महाविद्यालयों की परीक्षाओं में बैठते हैं। हमलोग अच्छी 4. _____ पाने के लिए भी परीक्षाओं में बैठते हैं। जैसे-जैसे हम ऊंची कक्षाओं में पहुँचते हैं, परीक्षाओं की 5. _____ का स्तर भी बढ़ जाता है।

SubQuestion No : 20

Q.20 रिक्त स्थान 5 की पूर्ति के लिए सबसे उपयुक्त विकल्प का चयन करें।

Ans ✓ 1. कठिनता

✗ 2. सहजता

✗ 3. सरलता

✗ 4. सुगमता

Question ID : 264330110931

Status : Not Answered

Chosen Option : --