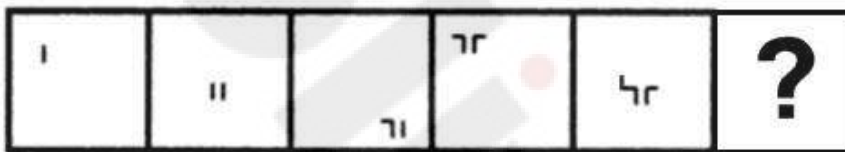


Constable GD in CAPFs SSF Rifleman GD in Assam Rifles and Sepoy in NCB Examination 2022

Roll Number	
Candidate Name	
Venue Name	iON Digital Zone iDZ Naino Ka Bas
Exam Date	13/01/2023
Exam Time	5:15 PM - 6:15 PM
Subject	Constable GD Examination 2022

Section : Part-A-General Intelligence and Reasoning

Q.1 Select the figure from among the given options that can replace the question mark (?) in the following series.



Ans

✗ 1.



✗ 2.



✓ 3.



✗ 4.



Question ID : 26433080492

Status : Answered

Chosen Option : 3

Q.2 In a certain code language, 'MANTLE' is written as 'JZKGIV' and 'TINKER' is written as 'QRKPBI'. How will 'DERIVE' be written in that language?

- Ans
- 1. AVORSV
 - 2. AUORST
 - 3. KBORSN
 - 4. KCQTUM

Question ID : 26433069464
Status : Answered
Chosen Option : 1

Q.3 Six students are sitting around a circular table facing the centre. Shirley is sitting second to the right of Leena. Diana is sitting fifth to the right of Shirley. Violet is sitting third to the right of Diana. Abdul is sitting second to the left of Diana. Vikram is sitting third to the left of Leena. Who is sitting between Vikram and Diana?

- Ans
- 1. Violet
 - 2. Shirley
 - 3. Abdul
 - 4. Leena

Question ID : 26433081779
Status : Answered
Chosen Option : 2

Q.4 Which option represents the correct order of the given words as they would appear in the English dictionary?

- 1 naughty
- 2 natural
- 3 national
- 4 nagging
- 5 napping

- Ans
- 1. 5,4,3,2,1
 - 2. 3,4,2,1,5
 - 3. 4,5,1,2,3
 - 4. 4,5,3,2,1

Question ID : 26433069315
Status : Answered
Chosen Option : 4

Q.5 Which letter-cluster will replace the question mark (?) to complete the given series? DKLX, EMOU, FORR, ?, HSXL

- Ans
- 1. GQTP
 - 2. GQUP
 - 3. GQUO
 - 4. GQTO

Question ID : 26433068572
Status : Answered
Chosen Option : 3

Q.6 Select the letter-cluster from among the given options that can replace the question mark (?) in the following series.
YCLE, DWQJ, IQVO, ?, SEFY

- Ans
- 1. HLAW
 - 2. NHKR
 - 3. HDLA
 - 4. NKAT

Question ID : 26433074748
Status : Answered
Chosen Option : 4

Q.7 Select the option that is related to the third word in the same way as the second word is related to the first word.
(The words must be considered as meaningful English words and must not be related to each other based on the number of letters/number of consonants/vowels in the word)
Painter : Brush :: Gardener : ?

- Ans
- 1. Spinners
 - 2. Rake
 - 3. Tractor
 - 4. Wrench

Question ID : 26433079469
Status : Answered
Chosen Option : 3

Q.8 Select the option that is related to the fifth term in the same way as the second term is related to the first term and fourth term is related to the third term.
SECURITY : 19ECURIT25 :: ENHANCED : 5NHANCE4 :: USAGE : ?

- Ans
- 1. 2343AG
 - 2. 5USAG3
 - 3. 21SAG5
 - 4. 1USAGE3

Question ID : 26433067263
Status : Answered
Chosen Option : 3

Q.9 Select the correct combination of mathematical signs to sequentially replace the * signs and to balance the given equation.
 $30 * 2 * 20 * 13 * 67$

- Ans
- 1. $\times, -, +, =$
 - 2. $\times, +, -, =$
 - 3. $\times, +, +, =$
 - 4. $+, +, -, =$

Question ID : 26433085687
Status : Answered
Chosen Option : 2

Q.10 In a code language, 'dark colors' is coded as 'yu nu', 'days are bright' is coded as 'wu tu ku', 'nights are dark' is coded as 'ku nu pu', 'paint bright' is coded as 'wu ru'. What is the code for the word 'paint'?

- Ans
- 1. ku
 - 2. tu
 - 3. wu
 - 4. ru

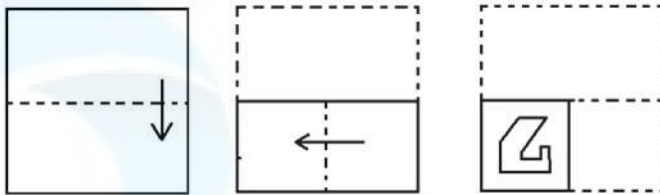
Question ID : 26433082274
Status : Answered
Chosen Option : 4

Q.11 Which two signs should be interchanged to make the below equation mathematically correct?
 $54 \times 6 - 36 \div 12 + 27 = 24$

- Ans
- 1. + and ÷
 - 2. + and -
 - 3. + and ×
 - 4. - and +

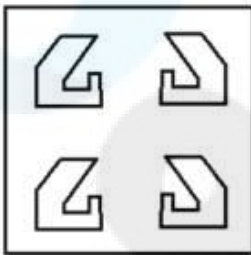
Question ID : 264330117520
Status : Answered
Chosen Option : 2

Q.12 The sequence of folding a piece of paper and the manner in which the folded paper has been cut is shown below. Select the figure which would most closely resemble the unfolded form of the paper.

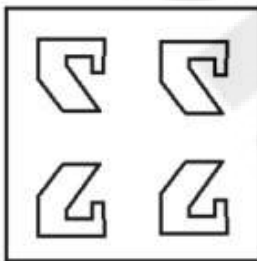


Ans


✗ 1.



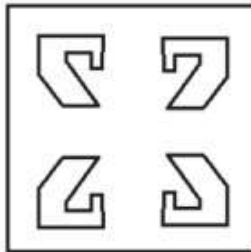
✗ 2.



✗ 3.



✓ 4.



Question ID : 26433087093

Status : Answered

Chosen Option : 4

Q.13 Seven people, A, B, C, D, E, F and G are sitting in a straight row, facing north. A sits second from the left. Only two people sit between A and C. Only 3 people sit between D and F and D is an immediate neighbour of A. B is an immediate neighbour of D and E is not an immediate neighbour of C. Who sits to the immediate right of C?

- Ans
- 1. G
 - 2. F
 - 3. D
 - 4. B

Question ID : 26433056935
Status : Answered
Chosen Option : 1

Q.14 Which of the following numbers will replace the question mark (?) in the given series?
589, 588, 583, ?, 433, -192

- Ans
- 1. 558
 - 2. 560
 - 3. 565
 - 4. 544

Question ID : 26433069396
Status : Answered
Chosen Option : 1

Q.15 In a certain code language,
'A + B' means 'A is the sister of B',
'A - B' means 'A is the father of B',
'A x B' means 'A is the brother of B' and
'A & B' means 'A is the son of B'.
How is T related to G if T + Q - R x H & G?

- Ans
- 1. Daughter
 - 2. Sister
 - 3. Mother's sister
 - 4. Husband's sister

Question ID : 26433070367
Status : Answered
Chosen Option : 4

Q.16 Select the option that is related to the third number in the same way as the second number is related to the first number and the sixth number is related to the fifth number.

7 : 1000 :: 4 : ? :: 12 : 3375

- Ans
- 1. 194
 - 2. 282
 - 3. 343
 - 4. 144

Question ID : 26433069188
Status : Answered
Chosen Option : 3

Q.17 Which of the following numbers will replace the question mark (?) in the given series?
0, 6, 24, 60, 120, ?

- Ans
- 1. 210
 - 2. 190
 - 3. 220
 - 4. 240

Question ID : 26433082000
Status : Answered
Chosen Option : 1

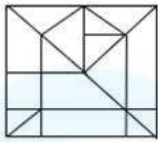
Q.18 Select the correct mirror image of the given figure when the mirror is placed at MN as shown below.



- Ans
- 1. fOrmuLAtiOn
 - 2. nOitAumrOf
 - 3. nOitAumrOf
 - 4. fOrmuLAtiOn

Question ID : 26433085549
Status : Answered
Chosen Option : 3

Q.19 Select the option figure that is embedded in the given figure (rotation is NOT allowed).



Ans

- 1.
- 2.
- 3.
- 4.

Question ID : 26433069485

Status : Answered

Chosen Option : 4

Q.20 Three statements are given followed by three conclusions numbered I, II and III. Assuming the statements to be true, even if they seem to be at variance with commonly known facts, decide which of the conclusions logically follow(s) from the statements.

Statements:

All beds are tables.

All cots are tables.

All tables are taps.

Conclusions:

I. All cots are taps.

II. Some taps are beds.

III. Some taps are cots.

- Ans
- 1. Only conclusions I and II follow
 - 2. Only conclusions I and III follow
 - 3. All conclusions follow
 - 4. Only conclusions II and III follow

Question ID : 26433082315

Status : Marked For Review

Chosen Option : 3

Q.1 The tribal group called 'Santhals' rose in revolt in _____.

- Ans
- 1. 1876
 - 2. 1855
 - 3. 1896
 - 4. 1860

Question ID : 264330115714
Status : Not Answered
Chosen Option : --

Q.2 Which of the following industries is reserved for the manufacture of items exclusively in the public sector?

- Ans
- 1. Fertilizers
 - 2. Atomic Energy
 - 3. Cotton and textile
 - 4. Medical

Question ID : 26433064865
Status : Answered
Chosen Option : 3

Q.3 India has inland navigation waterways of _____ km in length.

- Ans
- 1. 11,000
 - 2. 13,600
 - 3. 14,500
 - 4. 12,500

Question ID : 264330115554
Status : Answered
Chosen Option : 4

Q.4 Which Constitutional Amendment introduced the compulsory education to children between the age group of 6 to 14?

- Ans
- 1. 82nd
 - 2. 85th
 - 3. 83rd
 - 4. 86th

Question ID : 264330115625
Status : Answered
Chosen Option : 1

Q.5 The constellation 'Ursa Major' is also known as _____.

- Ans**
- 1. The Chained Maiden
 - 2. The Hunter
 - 3. The Queen
 - 4. The Great Bear

Question ID : 26433092213
Status : Answered
Chosen Option : 4

Q.6 The _____ mandates the requirement of POSH policy, in order to prevent sexual harassment against women in the workplace and also to protect them .

- Ans**
- 1. "The Sexual Harassment of Women at Workplace Act,2019"
 - 2. "The Sexual Harassment of Women Act,2015"
 - 3. "The Sexual Harassment of Women at Workplace (Prevention, Prohibition, and Redressal) Act, 2013".
 - 4. "The Sexual Harassment of Women at Workplace (Protection, Prohibition, and Redressal) Act, 2014"

Question ID : 264330116211
Status : Not Answered
Chosen Option : --

Q.7 As on April 2021, how many states have a Legislative Council?

- Ans**
- 1. 5
 - 2. 6
 - 3. 7
 - 4. 4

Question ID : 26433086670
Status : Answered
Chosen Option : 2

Q.8 Who sworn in as the Central Vigilance Commissioner (CVC) in August 2022?

- Ans**
- 1. Pradeep Kumar
 - 2. Sharad Kumar
 - 3. Suresh Patel
 - 4. Sanjay Kothari

Question ID : 264330115010
Status : Answered
Chosen Option : 3

Q.9 In India, Microfinance activities gained prominence in the early _____.

- Ans
- 1. 1980s
 - 2. 1990s
 - 3. 1950s
 - 4. 1970s

Question ID : 264330115307
Status : Answered
Chosen Option : 1

Q.10 Name the suicidal bags of the cell.

- Ans
- 1. Centriole
 - 2. Lysosomes
 - 3. Peroxisomes
 - 4. Glyoxysomes

Question ID : 264330115244
Status : Answered
Chosen Option : 2

Q.11 The First Formula 1 Race in India was held in _____.

- Ans
- 1. 2015
 - 2. 2011
 - 3. 2012
 - 4. 2013

Question ID : 264330116279
Status : Not Answered
Chosen Option : --

Q.12 Uttar Pradesh shares its international boundary with which country?

- Ans
- 1. Pakistan
 - 2. Bhutan
 - 3. China
 - 4. Nepal

Question ID : 264330116103
Status : Answered
Chosen Option : 4

Q.13 _____ is considered as the backbone of development in general.

- Ans
- 1. Education industry
 - 2. Dairy industry
 - 3. Banking
 - 4. Manufacturing industry

Question ID : 264330115410
Status : Answered
Chosen Option : 1

Q.14 During the Chaliha Sahib festival, Sindhis observe a _____-day fast to show their devotion to Lord Jhulelal.

- Ans
- 1. 20
 - 2. 10
 - 3. 40
 - 4. 30

Question ID : 264330115122
Status : Not Answered
Chosen Option : --

Q.15 Which team has won the highest number of Ranji Trophy titles?

- Ans
- 1. Uttar Pradesh
 - 2. Mumbai
 - 3. Tamil Nadu
 - 4. Karnataka

Question ID : 26433092329
Status : Answered
Chosen Option : 2

Q.16 Who among the following Congress leaders of India retired from Rajya Sabha in March 2022?

- Ans
- 1. Rahul Gandhi
 - 2. Supriya Sule
 - 3. Kumaraswami Kamaraj
 - 4. Palaniappan Chidambaram

Question ID : 264330114946
Status : Answered
Chosen Option : 3

Q.17 The Muttaraiyar held power in the Kaveri delta. They were subordinate to the Pallava kings of _____.

- Ans
- 1. Makotai
 - 2. Kanchipuram
 - 3. Thanjavur
 - 4. Arikamedu

Question ID : 26433085218
Status : Answered
Chosen Option : 2

Q.18 Identify the acid that convert zinc into zinc sulphate.

- Ans
- 1. Hydrochloric acid
 - 2. Nitric acid
 - 3. Sulphuric acid
 - 4. Acetic acid

Question ID : 26433091477
Status : Answered
Chosen Option : 3

Q.19 Gunakanta Dutta Borbyan was awarded the Sangeet Natak Akademi Award in which dance form?

- Ans
- 1. Kathak
 - 2. Chhau
 - 3. Kathakali
 - 4. Sattriya

Question ID : 264330115865
Status : Answered
Chosen Option : 1

Q.20 Which of the following dances is performed in Goa?

- Ans
- 1. Jhoomar
 - 2. Cheraw
 - 3. Karma Naach
 - 4. Fugdi

Question ID : 26433066530
Status : Answered
Chosen Option : 2

Section : Part-C-Elementary Mathematics

Q.1 A shopkeeper listed the marked price of a table at Rs.2500. If he sold it at 20% discount and 10% additional discount, then what is the selling price of the table?

- Ans
- 1. Rs.2,000
 - 2. Rs.1,900
 - 3. Rs.1,800
 - 4. Rs.2,100

Question ID : 26433075657
Status : Answered
Chosen Option : 3

Q.2 The average cost of an apple, an orange and a mango is Rs.36. The average cost of an apple and an orange is Rs.28 and that of an orange and a mango is Rs.32. The cost of an orange (in Rs.) is:

- Ans
- 1. 24
 - 2. 18
 - 3. 16
 - 4. 12

Question ID : 26433075719
Status : Answered
Chosen Option : 4

Q.3 Find the mean proportional between 4 and 900.

- Ans
- 1. 60
 - 2. 90
 - 3. 30
 - 4. 120

Question ID : 26433076185
Status : Answered
Chosen Option : 1

Q.4 Find the third proportional to 8 and 12

- Ans
- 1. 9
 - 2. 14
 - 3. 18
 - 4. 16

Question ID : 26433082392
Status : Answered
Chosen Option : 3

Q.5 The average weight of a truck and four cars is 48 kg, which is reduced by 1 kg if the weight of the truck is excluded. What is the weight of the truck?

- Ans
- 1. 50 kg
 - 2. 52 kg
 - 3. 51 kg
 - 4. 53 kg

Question ID : 26433080102
Status : Answered
Chosen Option : 2

Q.6 Yash can do a piece of work in 49 days and Naman can do the same work in 35 days. Saurav can do the same work in 7 days. Find the total days required to complete the same work if they work on alternate days such that Yash works on the first day, Naman works on the second day, Saurav work on the third day and then again Yash works on the fourth day and so on.

- Ans
- 1. 118/7 days
 - 2. 116/7 days
 - 3. 117/7 days
 - 4. 114/7 days

Question ID : 264330116895
Status : Answered
Chosen Option : 4

Q.7 The marked price of a jacket is ₹3,500. A shopkeeper offers 5% discount on it and then again offers 15% discount on the new price, and then again offers 20% discount on the new price. How much one has to pay for it?

- Ans
- 1. ₹2,260
 - 2. ₹2,261
 - 3. ₹2,265
 - 4. ₹2,263

Question ID : 26433080172
Status : Answered
Chosen Option : 2

Q.8 Arun and Aditya can complete a work separately in 8 days and 12 days, respectively. After 2 days of working alone, Aditya leaves the work, In how many days Arun will complete the remaining work?

- Ans
- 1. 6 days
 - 2. $7\frac{1}{3}$ days
 - 3. 7 days
 - 4. $6\frac{2}{3}$ days

Question ID : 26433080343
Status : Answered
Chosen Option : 4

Q.9 Rs.11,500 is borrowed at compound interest at the rate of 5% per annum, compounding annually. What will be the amount to be paid after 2 years?

- Ans
- 1. Rs.12,678.75
 - 2. Rs.12,677.85
 - 3. Rs.12,687.75
 - 4. Rs.12,678

Question ID : 26433065090
Status : Answered
Chosen Option : 2

Q.10 If the increase in the percentage of the consumption of a commodity is 25% so that overall budget does not change, then the price of the commodity falls by:

- Ans
- 1. 35%
 - 2. 25%
 - 3. 20%
 - 4. 30%

Question ID : 26433079927
Status : Answered
Chosen Option : 3

Q.11 If the curved surface area of a sphere with radius R_1 unit is the same as the total surface area of another hemisphere with radius R_2 , then the R_2 is:

- Ans
- 1. $\frac{2}{\sqrt{3}} R_1$
 - 2. $2R_1$
 - 3. same as R_1
 - 4. $\sqrt{3}R_1$

Question ID : 26433075209
Status : Answered
Chosen Option : 1

Q.12 A shopkeeper sells his old stock at 25 percent loss on cost price, but uses 30 percent less weight. What is his percentage profit or loss (consider up to two decimals)?

- Ans
- 1. Profit of 9.14 percent
 - 2. Loss of 7.14 percent
 - 3. Profit of 7.14 percent
 - 4. Loss of 9.14 percent

Question ID : 26433074222
Status : Not Answered
Chosen Option : --

Q.13 If A's income is 40 percent more than B's income, then what percentage does B earn less than A?

Ans

1. $21\frac{3}{7}$ percent

2. $25\frac{3}{7}$ percent

3. $18\frac{4}{7}$ percent

4. $28\frac{4}{7}$ percent

Question ID : 26433079848

Status : Answered

Chosen Option : 4

Q.14 A truck's value is reduced by 17 percent and is now worth Rs.33,32,948. What was its original price?

Ans 1. Rs.39,85,472

2. Rs.38,52,612

3. Rs.40,15,600

4. Rs.36,47,814

Question ID : 264330116815

Status : Not Answered

Chosen Option : --

Q.15 What is the number which, when increased by 20, is completely divisible by 18, 56 and 42?

Ans 1. 504

2. 484

3. 514

4. 524

Question ID : 26433080266

Status : Answered

Chosen Option : 4

Q.16 The greatest number which can divide 286, 1001 and 2420 is X. What is the value of $X/2$?

Ans 1. 6

2. 4.5

3. 5

4. 5.5

Question ID : 264330116663

Status : Not Answered

Chosen Option : --

Q.17 How many cubes of side 4 cm can be formed by melting a solid metallic cuboid of length 12 cm, breadth 8 cm and height 8 cm?

- Ans
- 1. 11
 - 2. 13
 - 3. 14
 - 4. 12

Question ID : 26433082998
Status : Answered
Chosen Option : 4

Q.18 In a 4 km race, A, B and C, each running at uniform speed, secured first, second and third position, respectively. If A beats B by 1 km and B beats C by 1 km, then by how many metres does A beat C in the same race?

- Ans
- 1. 1750 m
 - 2. 1700 m
 - 3. 1775 m
 - 4. 1725 m

Question ID : 26433063958
Status : Not Answered
Chosen Option : --

Q.19 What is the value of 35m/s in term of km/h?

- Ans
- 1. 144 km/h
 - 2. 96 km/h
 - 3. 126 km/h
 - 4. 106 km/h

Question ID : 26433075687
Status : Answered
Chosen Option : 3

Q.20 The population of a town was 2,50,000 three years ago. If it has increased by 3%, 4% and 6% in the last 3 years, find the present population of the town.

- Ans
- 1. 4,83,868
 - 2. 2,83,868
 - 3. 3,83,868
 - 4. 1,83,868

Question ID : 26433092034
Status : Answered
Chosen Option : 2

Q.1 Select the most appropriate option to fill in the blank.

Everything Priyanka did in her academic _____ ended in vain.

- Ans
- 1. adamant
 - 2. attends
 - 3. attempts
 - 4. attestations

Question ID : 26433089356
Status : Not Answered
Chosen Option : --

Q.2 Select the most appropriate meaning of the given idiom.

Lose your marbles

- Ans
- 1. To lose the wealth
 - 2. To waste the resources
 - 3. To become insane
 - 4. To be hopeful

Question ID : 26433073483
Status : Not Answered
Chosen Option : --

Q.3 Select the most appropriate synonym of the given word.

Benefit

- Ans
- 1. Genesis
 - 2. Advantage
 - 3. Rapture
 - 4. Injury

Question ID : 26433084679
Status : Not Answered
Chosen Option : --

Q.4 Select the most appropriate ANTONYM of the given word.

Dominate

- Ans
- 1. Surrender
 - 2. Rules
 - 3. Orders
 - 4. Command

Question ID : 26433084750
Status : Not Answered
Chosen Option : --

Q.5 Select the most appropriate ANTONYM of the underlined word to fill in the blank.

Children were amused by the puppet show, but they were _____ with the Chairman's speech.

- Ans
- 1. bored
 - 2. gratified
 - 3. charmed
 - 4. encouraged

Question ID : 26433089067
Status : Not Answered
Chosen Option : --

Q.6 Select the most appropriate option that can substitute the underlined segment in the given sentence. If there is no need to substitute it, select 'No substitution'.

The students ran quick to get on the train.

- Ans
- 1. No substitution
 - 2. The students ran quickly
 - 3. The student run quickly
 - 4. The students runs quickly

Question ID : 26433088742
Status : Not Answered
Chosen Option : --

Q.7 Select the most appropriate synonym to substitute the underlined word in the given sentence.

Sivasubramanian Iyer was not perturbed, nor did he get angry with his wife, but instead, served me with his own hands and sat down beside me to eat his meal.

- Ans
- 1. appreciated
 - 2. composed
 - 3. apprehended
 - 4. disturbed

Question ID : 26433073864
Status : Not Answered
Chosen Option : --

Q.8 Select the most appropriate option that can substitute the underlined segment in the given sentence. If there is no need to substitute it, select 'No substitution'.

The weathermen felt that it was more hotter today.

- Ans
- 1. No substitution
 - 2. hotting
 - 3. most hotter
 - 4. hotter

Question ID : 26433089113
Status : Not Answered
Chosen Option : --

Q.9 Select the most appropriate synonym to substitute the underlined word in the given sentence.

This bodyguard was like a firewall for the leader.

- Ans
- 1. forerunner
 - 2. perfectionist
 - 3. vanguard
 - 4. bulwark

Question ID : 26433074016
Status : Not Answered
Chosen Option : --

Q.10 Parts of the following sentence have been given as options. One of them may contain an error. Select the part that contains the error from the given options. If you don't find any error, mark 'No error' as your answer.

The software detected an anomaly cause by the virus.

- Ans
- 1. cause by the virus
 - 2. an anomaly
 - 3. The software detected
 - 4. No error

Question ID : 26433090485
Status : Not Answered
Chosen Option : --

Q.11 Select the INCORRECTLY spelt word.

- Ans
- 1. Contradict
 - 2. Arrogant
 - 3. Auspicious
 - 4. Geometry

Question ID : 26433073728
Status : Not Answered
Chosen Option : --

Q.12 Parts of the given sentence have been given as options. One of them contains a spelling error. Select the option that rectifies the error.

Macaroni penguins have a distenctive yellow feather crest on their forehead.

- Ans
- 1. forhead
 - 2. distinctive
 - 3. penguens
 - 4. chrest

Question ID : 26433059584
Status : Not Answered
Chosen Option : --

Q.13 Select the most appropriate meaning of the given idiom.

Bite off more than you can chew

- Ans
- 1. Overcome gluttony
 - 2. Too courageous
 - 3. Destructive power
 - 4. Take on a task that you cannot finish

Question ID : 26433073995
Status : Not Answered
Chosen Option : --

Q.14 Select the most appropriate option that can substitute the underlined segment in the given sentence.

As a student of medicine, you have to learn the terminologies by heart.

- Ans
- 1. general agreements
 - 2. virtuous professions
 - 3. special expressions
 - 4. significant conditions

Question ID : 26433099874
Status : Not Answered
Chosen Option : --

Q.15 Select the most appropriate ANTONYM of the given word.

Exhaust

- Ans
- 1. Burn
 - 2. Empty
 - 3. Collect
 - 4. Restore

Question ID : 26433084894
Status : Not Answered
Chosen Option : --

Comprehension:

In the following passage some words have been deleted. Fill in the blanks with the help of the alternatives given. Select the most appropriate option for each number.

The Sentinelese, the world's most remote tribe have (1)_____ the interest of millions of people. They (2)_____ on North Sentinel, a little island covered with forests that is about the size of Manhattan. They continue to reject any interaction with outsiders and assault anyone who (3)_____. The Sentinelese hunt, collect, and fish in the forest (4)_____ the coast. They build boats, unlike the nearby Jarawa tribe, who only makes (5)_____ thin outrigger canoes that are 'too narrow to fit two feet in'. Since they are guided and propelled using a pole similar to a punt, these can only be used in shallow waters.

SubQuestion No : 16

Q.16 Select the most appropriate answer for blank 1.

- Ans 1. sparked
 2. provoked
 3. enrolled
 4. affected

Question ID : 26433089706
Status : Not Answered
Chosen Option : --

Comprehension:

In the following passage some words have been deleted. Fill in the blanks with the help of the alternatives given. Select the most appropriate option for each number.

The Sentinelese, the world's most remote tribe have (1)_____ the interest of millions of people. They (2)_____ on North Sentinel, a little island covered with forests that is about the size of Manhattan. They continue to reject any interaction with outsiders and assault anyone who (3)_____. The Sentinelese hunt, collect, and fish in the forest (4)_____ the coast. They build boats, unlike the nearby Jarawa tribe, who only makes (5)_____ thin outrigger canoes that are 'too narrow to fit two feet in'. Since they are guided and propelled using a pole similar to a punt, these can only be used in shallow waters.

SubQuestion No : 17

Q.17 Select the most appropriate answer for blank 2.

- Ans 1. reside
 2. belong
 3. carry
 4. visit

Question ID : 26433089707
Status : Not Answered
Chosen Option : --

Comprehension:

In the following passage some words have been deleted. Fill in the blanks with the help of the alternatives given. Select the most appropriate option for each number.

The Sentinelese, the world's most remote tribe have (1)_____ the interest of millions of people. They (2)_____ on North Sentinel, a little island covered with forests that is about the size of Manhattan. They continue to reject any interaction with outsiders and assault anyone who (3)_____. The Sentinelese hunt, collect, and fish in the forest (4)_____ the coast. They build boats, unlike the nearby Jarawa tribe, who only makes (5)_____ thin outrigger canoes that are 'too narrow to fit two feet in'. Since they are guided and propelled using a pole similar to a punt, these can only be used in shallow waters.

SubQuestion No : 18

Q.18 Select the most appropriate answer for blank 3.

- Ans** 1. approaches
 2. commences
 3. addresses
 4. corresponds

Question ID : 26433089708

Status : Not Answered

Chosen Option : --

Comprehension:

In the following passage some words have been deleted. Fill in the blanks with the help of the alternatives given. Select the most appropriate option for each number.

The Sentinelese, the world's most remote tribe have (1)_____ the interest of millions of people. They (2)_____ on North Sentinel, a little island covered with forests that is about the size of Manhattan. They continue to reject any interaction with outsiders and assault anyone who (3)_____. The Sentinelese hunt, collect, and fish in the forest (4)_____ the coast. They build boats, unlike the nearby Jarawa tribe, who only makes (5)_____ thin outrigger canoes that are 'too narrow to fit two feet in'. Since they are guided and propelled using a pole similar to a punt, these can only be used in shallow waters.

SubQuestion No : 19

Q.19 Select the most appropriate answer for blank 4.

- Ans** 1. over
 2. beside
 3. across
 4. along

Question ID : 26433089709

Status : Not Answered

Chosen Option : --

Comprehension:

In the following passage some words have been deleted. Fill in the blanks with the help of the alternatives given. Select the most appropriate option for each number.

The Sentinelese, the world's most remote tribe have (1)_____ the interest of millions of people. They (2)_____ on North Sentinel, a little island covered with forests that is about the size of Manhattan. They continue to reject any interaction with outsiders and assault anyone who (3)_____. The Sentinelese hunt, collect, and fish in the forest (4)_____ the coast. They build boats, unlike the nearby Jarawa tribe, who only makes (5)_____ thin outrigger canoes that are 'too narrow to fit two feet in'. Since they are guided and propelled using a pole similar to a punt, these can only be used in shallow waters.

SubQuestion No : 20

Q.20 Select the most appropriate answer for blank 5.

- Ans
- 1. exclusively
 - 2. extremely
 - 3. abundantly
 - 4. knowingly

Question ID : 26433089710

Status : Not Answered

Chosen Option : --

Section : Part-D-Hindi

Q.1 वे जन्मपर्यंत ब्रह्मचारी रहे।
उपर्युक्त वाक्य में रेखांकित पद के स्थान पर निम्न में से कौन सा शब्द आ सकता है?

- Ans
- 1. आजन्म
 - 2. जीवन के बाद
 - 3. पुनर्जन्म
 - 4. जीवन आरंभ होने के बाद

Question ID : 26433063057

Status : Answered

Chosen Option : 1

Q.2 'हुक्का पानी बंद करना' मुहावरे का सही अर्थ है -

- Ans
- 1. खाना देना बंद करना
 - 2. नशा छोड़ना
 - 3. जाति से बहिष्कृत करना
 - 4. नशा करना

Question ID : 26433065931

Status : Answered

Chosen Option : 3

Q.3 निम्नलिखित वाक्य का शुद्ध रूप क्या होगा?
'वे सब काल चक्र के पहिए के नीचे पिश गए।'

- Ans
- 1. वे सब कालचक्र के पहिए के नीचे पेसे गए।
 - 2. वे कालचक्र के नीचे पीसता गया।
 - 3. वे कालचक्र के पहिए के नीचे पीस गए।
 - 4. वे सब कालचक्र में पिस गए।

Question ID : 26433063075
Status : Answered
Chosen Option : 3

Q.4 'महादेवी वर्मा महान कवियत्री थीं।' इस वाक्य में अशुद्ध वर्तनी वाला शब्द है -

- Ans
- 1. कवियत्री
 - 2. वर्मा
 - 3. महादेवी
 - 4. महान

Question ID : 26433080902
Status : Answered
Chosen Option : 1

Q.5 नीचे दिए शब्द के लिए उचित वाक्यांश दिए गए विकल्पों में से चुनिए-
अन्यमनस्क

- Ans
- 1. जो नया न हो
 - 2. जो पहले न हुआ हो
 - 3. किसी और स्थान पर
 - 4. जिसका मन किसी दूसरी ओर लगा हो

Question ID : 26433062388
Status : Answered
Chosen Option : 4

Q.6 'नाव' के पर्यायवाची शब्द से निम्न वाक्य पूर्ण कीजिए।
नाविक _____ से नदी पार कराता है।

- Ans
- 1. रैन
 - 2. कश्ती
 - 3. तरु
 - 4. रेत

Question ID : 26433063086
Status : Answered
Chosen Option : 2

Q.7 भगवान विष्णु ने एक अवतार कूर्म के रूप में भी लिया था।
उपरोक्त वाक्य में प्रयुक्त 'कूर्म' शब्द का पर्याय क्या होगा?

- Ans
- 1. श्वान
 - 2. सूकर
 - 3. कछुआ
 - 4. सिंह

Question ID : 26433080855
Status : Answered
Chosen Option : 3

Q.8 निम्नलिखित में से कौन सा सार्वनामिक विशेषण शब्द नहीं है?

- Ans
- 1. तुम्हारा
 - 2. जैसा
 - 3. मैं
 - 4. ऐसा

Question ID : 26433085054
Status : Answered
Chosen Option : 4

Q.9 निम्नलिखित विकल्पों में से कौन सा एक वाक्य संयोजक क्रिया-विशेषण से सम्बन्ध रखता है?

- Ans
- 1. जहाँ आप पढ़ेंगे, वहाँ मैं भी पढ़ूँगा।
 - 2. वह सो रहा था।
 - 3. वे लेटे हुए थे।
 - 4. मैं जाग रहा हूँ।

Question ID : 26433062952
Status : Answered
Chosen Option : 1

Q.10 प्रत्यक्ष को प्रमाण की आवश्यकता नहीं होती।
उपरोक्त वाक्य में रेखांकित शब्द के विलोम शब्द का चयन कीजिए।

- Ans
- 1. परोक्ष
 - 2. समक्ष
 - 3. ओक्षा
 - 4. दीर्घ

Question ID : 26433079641
Status : Answered
Chosen Option : 1

Q.11 निम्नलिखित वाक्य में रेखांकित शब्द के सही विलोम से दिए गए वाक्य के रिक्त स्थान की पूर्ति कीजिए।
उसका रवैया दुलमुल नहीं है, वह अपनी बात पर सदैव _____ रहता है।

- Ans
- 1. निश्चित
 - 2. अवश
 - 3. अचल
 - 4. अटल

Question ID : 26433085003
Status : Answered
Chosen Option : 4

Q.12 निम्नलिखित वाक्य में रेखांकित अंश के स्थान पर सबसे उपयुक्त विकल्प निम्न में से कौन-सा होगा?
शत्रु मैदान से दौड़ खड़ा हुआ

- Ans
- 1. उठ
 - 2. रवाना
 - 3. निकल
 - 4. भाग

Question ID : 26433072585
Status : Answered
Chosen Option : 4

Q.13 'घोड़े बेंचकर सोना' मुहावरे का सही अर्थ है -

- Ans
- 1. गहरी नींद सोना
 - 2. जिम्मेदारी न लेना
 - 3. नींद न आना
 - 4. खुश होना

Question ID : 26433065921
Status : Answered
Chosen Option : 1

Q.14 निम्नलिखित वाक्यांश के लिय उपयुक्त सार्थक शब्द चुनिए।
भाप के कारण होने वाला अंधेरा

- Ans
- 1. अंधियारा
 - 2. धुंध
 - 3. रात
 - 4. बूद

Question ID : 26433073309
Status : Answered
Chosen Option : 2

Q.15 'जिसका जन्म बाद में हुआ हो' वाक्यांश के लिए उपयुक्त शब्द क्या होगा?

- Ans 1. अग्रज
 2. अनुज
 3. अग्रजा
 4. ज्येष्ठ

Question ID : 26433067068

Status : Answered

Chosen Option : 1

Comprehension:

प्रश्न 1 से 5 तक के उत्तर निम्नांकित गद्यावतरण के आधार पर दीजिए।

जिन दिनों जीवन अपेक्षाकृत गतिहीन था, उन दिनों कथनी और करनी का विरोध उतना नहीं था, लेकिन ज्यों-ज्यों राजनीतिक और आर्थिक परिवर्तनों की रफ्तार तेज होती गयी, इस विरोध की उग्रता भी अधिकाधिक (1) होती गयी। आज जब हम (2) के दरवाजे पर खड़े हैं, तब हमें अपने इस आंतरिक विरोध का शमन करना ही पड़ेगा अन्यथा सर्वनाश अवश्यभावी है। मानव - मन की अतल गहराई में हम यदि झाँक कर देखें तो वहाँ आज भी (3) की दमित वासनाएँ केंचुली मारे बैठी हैं। वाणी उसकी कितनी ही सांस्कारिक क्यों न हो गयी हो, पर (4) में मैल के पर्त और भी मोटे होते गए हैं। हमारे आचरण की तुलना में हमारे उद्गार इतने ऊँचे हैं कि उन्हें सुनकर आश्चर्य होता है। बात तो हम 'वसुधैव कुटुम्बकम्' की करते हैं, परंतु काम हमारे कुछ और होते हैं। सिद्धांत तो सहिष्णुता का बघारते हैं, लेकिन व्यवहार में हम चाहते हैं कि दूसरे भी वही सोचे, जो हम सोचते हैं - हमारा नेतृत्व और श्रेष्ठता बेझिझक स्वीकार करे। यह खतरे की स्थिति में है और यह खतरा बाहर नहीं, हमारे भीतर बैठा (5) की ताक में है।

SubQuestion No : 16

Q.16 निम्न विकल्पों में से 'प्रति' उपसर्ग वाले सर्वाधिक उपयुक्त शब्द का चयन कर रिक्त स्थान (1) की पूर्ति कीजिए।

- Ans 1. प्रत्यक्ष
 2. प्रत्येक
 3. प्रतिकार
 4. प्रतिकूल

Question ID : 26433069956

Status : Answered

Chosen Option : 1

Comprehension:

प्रश्न 1 से 5 तक के उत्तर निम्नांकित गद्यावतरण के आधार पर दीजिए।

जिन दिनों जीवन अपेक्षाकृत गतिहीन था, उन दिनों कथनी और करनी का विरोध उतना नहीं था, लेकिन ज्यों – ज्यों राजनीतिक और आर्थिक परिवर्तनों की रफ्तार तेज होती गयी, इस विरोध की उग्रता भी अधिकाधिक (1) होती गयी। आज जब हम (2) के दरवाजे पर खड़े हैं, तब हमें अपने इस आंतरिक विरोध का शमन करना ही पड़ेगा अन्यथा सर्वनाश अवश्यंभावी है। मानव - मन की अतल गहराई में हम यदि झाँक कर देखें तो वहाँ आज भी (3) की दमित वासनाएँ केंचुली मारे बैठी हैं। वाणी उसकी कितनी ही सांस्कारिक क्यों न हो गयी हो, पर (4) में मैल के पर्त और भी मोटे होते गए हैं। हमारे आचरण की तुलना में हमारे उद्गार इतने ऊँचे हैं कि उन्हें सुनकर आश्चर्य होता है। बात तो हम 'वसुधैव कुटुम्बकम्' की करते हैं, परंतु काम हमारे कुछ और होते हैं। सिद्धांत तो सहिष्णुता का बघारते हैं, लेकिन व्यवहार में हम चाहते हैं कि दूसरे भी वही सोचे, जो हम सोचते हैं – हमारा नेतृत्व और श्रेष्ठता बेझिझक स्वीकार करे। यह खतरे की स्थिति में है और यह खतरा बाहर नहीं, हमारे भीतर बैठा (5) की ताक में है।

SubQuestion No : 17

Q.17 निम्न विकल्पों में से उपयुक्त शब्द का चयन कर रिक्त स्थान (2) की पूर्ति कीजिए।

- Ans 1. कलियुग
 2. अणुयुग
 3. अंधायुग
 4. मध्ययुग

Question ID : 26433069957

Status : Answered

Chosen Option : 1

Comprehension:

प्रश्न 1 से 5 तक के उत्तर निम्नांकित गद्यावतरण के आधार पर दीजिए।

जिन दिनों जीवन अपेक्षाकृत गतिहीन था, उन दिनों कथनी और करनी का विरोध उतना नहीं था, लेकिन ज्यों – ज्यों राजनीतिक और आर्थिक परिवर्तनों की रफ्तार तेज होती गयी, इस विरोध की उग्रता भी अधिकाधिक (1) होती गयी। आज जब हम (2) के दरवाजे पर खड़े हैं, तब हमें अपने इस आंतरिक विरोध का शमन करना ही पड़ेगा अन्यथा सर्वनाश अवश्यंभावी है। मानव - मन की अतल गहराई में हम यदि झाँक कर देखें तो वहाँ आज भी (3) की दमित वासनाएँ केंचुली मारे बैठी हैं। वाणी उसकी कितनी ही सांस्कारिक क्यों न हो गयी हो, पर (4) में मैल के पर्त और भी मोटे होते गए हैं। हमारे आचरण की तुलना में हमारे उद्गार इतने ऊँचे हैं कि उन्हें सुनकर आश्चर्य होता है। बात तो हम 'वसुधैव कुटुम्बकम्' की करते हैं, परंतु काम हमारे कुछ और होते हैं। सिद्धांत तो सहिष्णुता का बघारते हैं, लेकिन व्यवहार में हम चाहते हैं कि दूसरे भी वही सोचे, जो हम सोचते हैं – हमारा नेतृत्व और श्रेष्ठता बेझिझक स्वीकार करे। यह खतरे की स्थिति में है और यह खतरा बाहर नहीं, हमारे भीतर बैठा (5) की ताक में है।

SubQuestion No : 18

Q.18 'गुफाओं में निवास करनेवाले प्रागैतिहासिक मानव' वाक्यांश के लिए प्रयुक्त होने वाले एक शब्द से रिक्त स्थान (3) की पूर्ति कीजिए।

- Ans 1. महामानव
 2. गुहामानव
 3. गूढमानव
 4. गैरिकमानव

Question ID : 26433069958

Status : Answered

Chosen Option : 3

Comprehension:

प्रश्न 1 से 5 तक के उत्तर निम्नांकित गद्यावतरण के आधार पर दीजिए।
जिन दिनों जीवन अपेक्षाकृत गतिहीन था, उन दिनों कथनी और करनी का विरोध उतना नहीं था, लेकिन ज्यों – ज्यों राजनीतिक और आर्थिक परिवर्तनों की रफ्तार तेज होती गयी, इस विरोध की उग्रता भी अधिकाधिक (1) होती गयी। आज जब हम (2) के दरवाजे पर खड़े हैं, तब हमें अपने इस आंतरिक विरोध का शमन करना ही पड़ेगा अन्यथा सर्वनाश अवश्यंभावी है। मानव - मन की अतल गहराई में हम यदि झाँक कर देखें तो वहाँ आज भी (3) की दमित वासनाएँ केंचुली मारे बैठी हैं। वाणी उसकी कितनी ही सांस्कारिक क्यों न हो गयी हो, पर (4) में मैल के पर्त और भी मोटे होते गए हैं। हमारे आचरण की तुलना में हमारे उद्गार इतने ऊँचे हैं कि उन्हें सुनकर आश्चर्य होता है। बात तो हम 'वसुधैव कुटुम्बकम्' की करते हैं, परंतु काम हमारे कुछ और होते हैं। सिद्धांत तो सहिष्णुता का बघारते हैं, लेकिन व्यवहार में हम चाहते हैं कि दूसरे भी वही सोचे, जो हम सोचते हैं – हमारा नेतृत्व और श्रेष्ठता बेझिझक स्वीकार करे। यह खतरे की स्थिति में है और यह खतरा बाहर नहीं, हमारे भीतर बैठा (5) की ताक में है।

SubQuestion No : 19

Q.19 निम्नलिखित विकल्पों में से उपयुक्त शब्द चुनकर रिक्त स्थान (4) की पूर्ति कीजिए।

- Ans
- 1. मानवजगत
 - 2. पशुजगत
 - 3. अंतर्जगत
 - 4. बाह्यजगत

Question ID : 26433069959

Status : Answered

Chosen Option : 1

Comprehension:

प्रश्न 1 से 5 तक के उत्तर निम्नांकित गद्यावतरण के आधार पर दीजिए।
जिन दिनों जीवन अपेक्षाकृत गतिहीन था, उन दिनों कथनी और करनी का विरोध उतना नहीं था, लेकिन ज्यों – ज्यों राजनीतिक और आर्थिक परिवर्तनों की रफ्तार तेज होती गयी, इस विरोध की उग्रता भी अधिकाधिक (1) होती गयी। आज जब हम (2) के दरवाजे पर खड़े हैं, तब हमें अपने इस आंतरिक विरोध का शमन करना ही पड़ेगा अन्यथा सर्वनाश अवश्यंभावी है। मानव - मन की अतल गहराई में हम यदि झाँक कर देखें तो वहाँ आज भी (3) की दमित वासनाएँ केंचुली मारे बैठी हैं। वाणी उसकी कितनी ही सांस्कारिक क्यों न हो गयी हो, पर (4) में मैल के पर्त और भी मोटे होते गए हैं। हमारे आचरण की तुलना में हमारे उद्गार इतने ऊँचे हैं कि उन्हें सुनकर आश्चर्य होता है। बात तो हम 'वसुधैव कुटुम्बकम्' की करते हैं, परंतु काम हमारे कुछ और होते हैं। सिद्धांत तो सहिष्णुता का बघारते हैं, लेकिन व्यवहार में हम चाहते हैं कि दूसरे भी वही सोचे, जो हम सोचते हैं – हमारा नेतृत्व और श्रेष्ठता बेझिझक स्वीकार करे। यह खतरे की स्थिति में है और यह खतरा बाहर नहीं, हमारे भीतर बैठा (5) की ताक में है।

SubQuestion No : 20

Q.20 निम्न विकल्पों में से 'मौका' शब्द के पर्यायवाची द्वारा रिक्त स्थान (5) की पूर्ति कीजिए।

- Ans
- 1. विलंब
 - 2. अवसर
 - 3. सारांश
 - 4. सहायता

Question ID : 26433069960

Status : Not Answered

Chosen Option : --