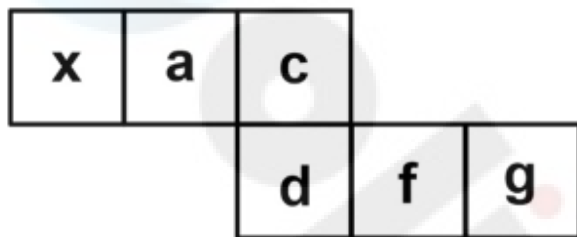


**Constable GD in Central Armed Police Forces CAPFs SSF Rifleman GD in Assam
Rifles Examination 2024**

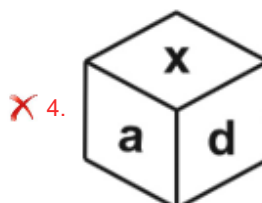
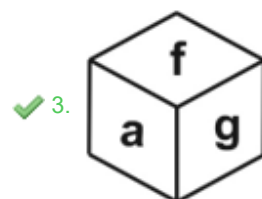
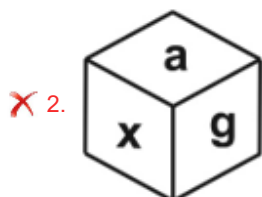
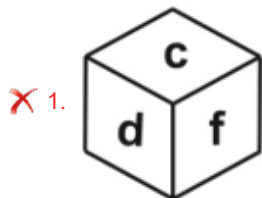
Exam Date	22/02/2024
Exam Time	5:00 PM - 6:00 PM
Subject	Constable GD Examination 2024

Section : Part-A-General Intelligence and Reasoning

Q.1 Select the dice which cannot be formed on folding the given sheet.



Ans



Q.2 Which of the following numbers will replace the question mark (?) in the given series?
33, 34, 38, 47, 63, ?

- Ans
- ✗ 1. 79
 - ✗ 2. 72
 - ✗ 3. 96
 - ✓ 4. 88

Q.3 Which of the following groups of letters when sequentially placed from left to right will complete the given series?

cd_fc_efcdefcde_cdefcde_cdef

- Ans
- ☒ 1. efdf
 - ☒ 2. cddf
 - ☒ 3. edff
 - ☒ 4. fcde

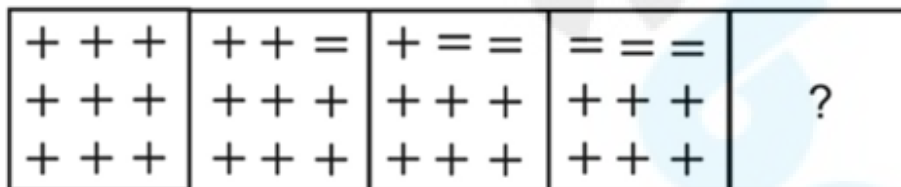
Q.4 Seven girls A, B, C, X, Y, W and Z are sitting around a circular table facing opposite to the centre (not necessarily in the same order). W is second to the left of X. W is the immediate neighbour of both B and C. Z is fourth to the left of B. Y is not the immediate neighbour of C. Who is sitting on the immediate left of X?

- Ans
- ☒ 1. B
 - ☒ 2. A
 - ☒ 3. Y
 - ☒ 4. Z

Q.5 In a certain code language, if PIZZA is coded as BAAJQ, BURGER is coded as SFHVC, then what will NOODLES be coded as?

- Ans
- ☒ 1. KSAHTRO
 - ☒ 2. TFMEPPO
 - ☒ 3. OPPEMFT
 - ☒ 4. ORTHASK

Q.6 Select the figure that will replace the question mark (?) in the following figure series.



- Ans
- ☒ 1.

=	=	=
+	+	=
+	+	+
 - ☒ 2.

=	=	+
+	=	+
=	=	=
 - ☒ 3.

=	=	=
=	=	+
=	=	=
 - ☒ 4.

=	=	=
=	=	=
+	+	+

Q.7 Arrange the following words in alphabetical order:

1. CONFUSION
2. CONFIDENCE
3. CONFIRM
4. CONFLICT
5. CONDUCTOR

Ans ☒ 1. 5, 2, 3, 4, 1

☐ 2. 5, 2, 1, 3, 4

☐ 3. 5, 2, 3, 1, 4

☐ 4. 3, 5, 2, 4, 1

Q.8 A series is given with one term missing. Select the correct alternative from the given ones that will complete the series.

MNRT, QRVX, UVZB, YZDF, ?

Ans ☒ 1. CDHJ

☐ 2. DEHJ

☐ 3. DEFG

☐ 4. DEMR

Q.9 In the following question, select the related letters from the given alternatives.

AEI : CGK :: NRV : ?

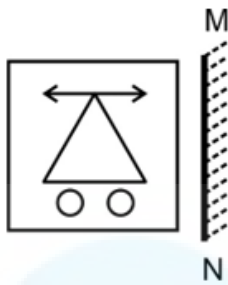
Ans ☐ 1. UXZ

☒ 2. PTX

☐ 3. PQR


☐ 4. SRT

Q.10 Select the correct mirror image of the given figure when the mirror MN is placed to the right side of the figure.

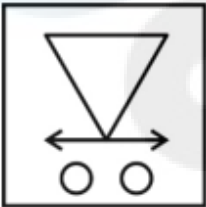


Ans

✓ 1.



✗ 2.



✗ 3.



✗ 4.



Q.11 Six boys Sumit, Gopal, Honey, Ishaan, Jatin and Lalit are sitting around a circular table facing towards the centre. Ishaan is the third to the left of Sumit. Jatin and Honey are the immediate neighbours of Ishaan. Lalit is to the immediate right of Jatin. Who is sitting to the immediate left of Honey?

Ans

✓ 1. Gopal

✗ 2. Jatin

✗ 3. Ishaan

✗ 4. Sumit

Q.12 Which of the following numbers will replace the question mark (?) in the given series?
17, 25, 37, 53, 73, 97, ?

Ans

✗ 1. 129

✗ 2. 128

✓ 3. 125

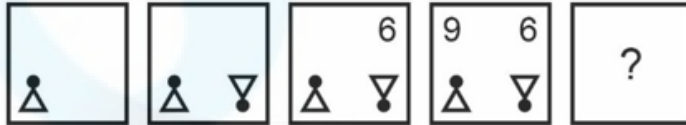
✗ 4. 121

Q.13 Which two signs should be interchanged to make the given equation correct?

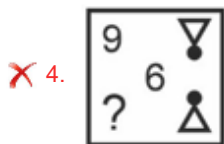
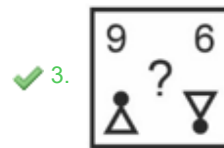
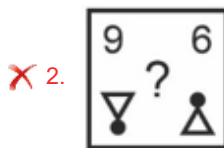
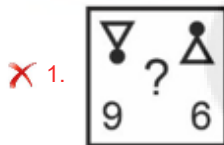
$$14 - 21 \times 7 + 3 \div 6 = 29$$

- Ans
- ☒ 1. \times and $-$
 - ☒ 2. \times and \div
 - ☒ 3. $=$ and \times
 - ☒ 4. $+$ and $-$

Q.14 In the following question, select the figure which can be placed at the sign of question mark (?) from the given alternatives.



Ans



Q.15 If $15\ A\ 8\ B\ 9\ C\ 3 = 20$ and $18\ A\ 20\ B\ 15\ C\ 5 = 35$, then $8\ A\ 6\ B\ 4\ C\ 2 = ?$

- Ans
- ☒ 1. 12
 - ☒ 2. 15
 - ☒ 3. 11
 - ☒ 4. 13

Q.16 In a certain code language, if RHYMES is coded as PFWKGQ, LIME is coded as JKKG, then what will CHIMES be coded as?

- Ans
- ☒ 1. KFAKGQ
 - ☒ 2. KFAQGK
 - ☒ 3. AFKQ GK
 - ☒ 4. AFKKGQ

Q.17 In the following question, select the related letter pair from the given alternatives.

YL : UH :: ?

- Ans
- ☒ 1. PQ : RS
 - ☒ 2. OB : GT
 - ☒ 3. TG : PC
 - ☒ 4. UU : VV

Q.18 Which answer figure will complete the pattern in the question figure? (rotation is not allowed)



Ans

- ☒ 1.
- ☒ 2.
- ☒ 3.
- ☒ 4.

Q.19 Three Statements are given followed by two conclusions numbered I and II. Assuming the statements to be true, even if they seem to be at variance with commonly known facts, decide which of the conclusions logically follow(s) from the statements.

Statement I: Some engineers are doctors.

Statement II: All doctors are lawyers.

Statement III: Some lawyers are not teachers.

Conclusion I: Some lawyers are teachers.

Conclusion II: Some engineers are lawyers.

- Ans**
- ☐ 1. Only conclusion I follows
 - ☒ 2. Only conclusion II follows
 - ☐ 3. Neither conclusion I nor II follows
 - ☐ 4. Both conclusions I and II follow

Q.20 If $P + Q$ means P is the brother of Q, $P \times Q$ means P is the mother of Q, $P \div Q$ means P is the father of Q and $P - Q$ means P is the sister of Q. If $A \times B \div C - D + E - F$, then how is A related to E?

- Ans**
- ☒ 1. Father's mother
 - ☐ 2. Father
 - ☐ 3. Mother
 - ☐ 4. Father's sister

Section : Part-B-General Knowledge and General awareness

Q.1 Which of the following measures of money supply is most liquid?

- Ans**
- ☐ 1. M3
 - ☐ 2. M2
 - ☐ 3. M4
 - ☒ 4. M1

Q.2 In which year was the Dandi March by Mahatma Gandhi launched?

- Ans**
- ☐ 1. 1940
 - ☐ 2. 1950
 - ☐ 3. 1920
 - ☒ 4. 1930

Q.3 Sangeet Natak Academy Awards were earlier known as _____ .

- Ans**
- ☐ 1. Residential Awards
 - ☐ 2. Prestigious Awards
 - ☒ 3. Presidential Awards
 - ☐ 4. Cultural Awards

Q.4 Heptathlon for women includes _____ events.

- Ans
- ☒ 1. 11
 - ☒ 2. 7
 - ☒ 3. 5
 - ☒ 4. 10

Q.5 Gangaur festival is historically native to which of the following states?

- Ans
- ☒ 1. Himachal Pradesh
 - ☒ 2. Uttar Pradesh
 - ☒ 3. Madhya Pradesh
 - ☒ 4. Rajasthan

Q.6 PR Sreejesh is a _____.

- Ans
- ☒ 1. hockey player
 - ☒ 2. football player
 - ☒ 3. cricket player
 - ☒ 4. badminton player

Q.7 Which of the following events was played in National Games 2023?

I. Sepak Takraw

II. Mallakhamb

- Ans
- ☒ 1. Both I and II
 - ☒ 2. Only I
 - ☒ 3. Neither I nor II
 - ☒ 4. Only II

Q.8 In India, Garibi Hatao and attainment of self-reliance was the main objective of _____.

- Ans
- ☒ 1. First Five Year Plan
 - ☒ 2. Fifth Five Year Plan
 - ☒ 3. Seventh Five Year Plan
 - ☒ 4. Third Five Year Plan

Q.9 Which of the following departments under the Ministry of Finance has launched the scheme “Vivad se Vishwas II” – (Contractual Disputes) to effectively settle the pending contractual disputes of government and government undertakings?

- Ans
- ☒ 1. Department of Economic Affairs
 - ☒ 2. Department of Expenditure
 - ☒ 3. Department of Financial Services
 - ☒ 4. Department of Revenue

Q.10 Which of the following is correct regarding Conditions of Governor's office?

I. The Governor can hold any other office of profit.

II. The Governor shall be entitled without payment of rent to the use of his official residences.

Ans ☒ 1. Only II

☐ 2. Neither I nor II

☐ 3. Both I and II

☐ 4. Only I

Q.11 Which instrument was played by Ustad Asad Ali Khan?

Ans ☐ 1. Sarod

☐ 2. Santoor

☐ 3. Sitar

☒ 4. Rudra Veena

Q.12 Which of the following parts of the Indian Constitution deals with The Union and its Territories?

Ans ☐ 1. Part II

☐ 2. Part III

☐ 3. Part IV

☒ 4. Part I

Q.13 Kuchipudi originated in a village named Kuchipudi in the Indian state of _____ .

Ans ☐ 1. Kerala

☐ 2. Tamil Nadu

☒ 3. Andhra Pradesh

☐ 4. Uttar Pradesh

Q.14 India shares its land borders with _____ countries.

Ans ☐ 1. eight

☒ 2. seven

☐ 3. five

☐ 4. six

Q.15 Which of the following five year plan of India was a complete failure?

Ans ☐ 1. Seventh Five Year Plan

☒ 2. Third Five Year Plan

☐ 3. First Five Year Plan

☐ 4. Sixth Five Year Plan

Q.16 What is the name of an Indian-American cancer physician, who is among 15 individuals chosen to the 2023-2024 class of White House Fellows?

- Ans**
- ☐ 1. Rahul Gupta
 - ☐ 2. Atul Butte
 - ☐ 3. Kavitha Bhatia
 - ☒ 4. Kamal Menghrajani

Q.17 National Rural Employment Guarantee Act 2005. It promises _____ days of guaranteed wage employment to all rural households in India who volunteer to do unskilled manual work.

- Ans**
- ☐ 1. 365
 - ☐ 2. 90
 - ☒ 3. 100
 - ☐ 4. 180

Q.18 H_2 is a Molecular Formula of which of the following elements?

- Ans**
- ☐ 1. Lead
 - ☒ 2. Hydrogen
 - ☐ 3. Platina
 - ☐ 4. Sulphur

Q.19 Under Pradhan Mantri Awas Yojana (Gramin) in Himachal Pradesh, 19,578 houses have been sanctioned in Himachal Pradesh and _____ houses have been completed as of November 9, 2023.

- Ans**
- ☐ 1. 9,800
 - ☒ 2. 14,906
 - ☐ 3. 18,502
 - ☐ 4. 4,580

Q.20 A famous play, 'Abhijnana Shakuntalam' was written by which of the following personalities?

- Ans**
- ☐ 1. Kalhana
 - ☐ 2. Asvaghosa
 - ☒ 3. Kalidasa
 - ☐ 4. Vishakhadatta

Section : Part-C-Elementary Mathematics

Q.1 The difference between circumference and the diameter of a circle is 12 cm. What is the area of the circle?

- Ans**
- ☐ 1. 25 cm^2
 - ☒ 2. 24.64 cm^2
 - ☐ 3. 32.26 cm^2
 - ☐ 4. 18 cm^2

Q.2 The Least Common Multiple of two prime numbers x and y , ($x < y$) is 145. Then what is the value of $(10x - y)$?

- Ans**
- ☐ 1. 11
 - ☒ 2. 21
 - ☐ 3. 27
 - ☐ 4. 18

Q.3 A can do a piece of work in 28 days. B is 68% more efficient than A. Find the number of days taken by B to do the same piece of work.

- Ans**
- ☐ 1. 28/3 days
 - ☐ 2. 15 days
 - ☒ 3. 50/3 days
 - ☐ 4. 25/2 days

Q.4 A person lent certain sum of money at the annual rate of 24 percent on simple interest. In 5 years the interest amounted to Rs. 1200 more than the sum lent. What is the sum lent?

- Ans**
- ☐ 1. Rs. 2400
 - ☐ 2. Rs. 3600
 - ☒ 3. Rs. 6000
 - ☐ 4. Rs. 3000

Q.5 Abhishek marks the price of his laptop 50 percent above the cost price. He allows his customer a discount of 30 percent on the marked price. What is the profit percentage?

- Ans**
- ☒ 1. 5 percent
 - ☐ 2. 20 percent
 - ☐ 3. 8 percent
 - ☐ 4. 10 percent

Q.6 Selling price of a bag is Rs. 1056 and profit percentage is 20 percent. If selling price is Rs. 800, then what will be the loss percentage?

- Ans**
- ☐ 1. 4.25 percent
 - ☒ 2. 9.09 percent
 - ☐ 3. 11.11 percent
 - ☐ 4. 8.08 percent

Q.7 What is the value of 7.14 percent of 66.67 percent of 21.84?

- Ans**
- ☐ 1. 1.07
 - ☐ 2. 2.02
 - ☒ 3. 1.04
 - ☐ 4. 1.09

Q.8 Compound interest (compounding annually) on a sum for 2 years is Rs. 967.5. If rate of interest is 15 percent per annum, then what is the sum?

- Ans**
- ☒ 1. Rs. 3000
 - ☐ 2. Rs. 2400
 - ☐ 3. Rs. 2800
 - ☐ 4. Rs. 2700

Q.9 Cost price of an article is Rs. 360. If the profit percentage is 8 percent, then what is the value of profit?

- Ans**
- ☐ 1. Rs. 30
 - ☐ 2. Rs. 25.6
 - ☒ 3. Rs. 28.8
 - ☐ 4. Rs. 24.5

Q.10 What is the average of squares of first 17 natural numbers?

- Ans**
- ☐ 1. 94
 - ☒ 2. 105
 - ☐ 3. 124
 - ☐ 4. 113

Q.11 Which of the following number is divisible by 9?

- Ans**
- ☐ 1. 1474
 - ☐ 2. 4124
 - ☒ 3. 4131
 - ☐ 4. 1254

Q.12 The tax imposed on an article is decreased by 17% and its consumption increases by 17%. Find the percentage change in revenue.

- Ans**
- ☐ 1. 2.89% increase
 - ☒ 2. 2.89% decrease
 - ☐ 3. 17% decrease
 - ☐ 4. 17% increase

Q.13 What is the value of $\frac{2}{1 \times 3} + \frac{2}{3 \times 5} + \frac{2}{5 \times 7} + \dots + \frac{2}{99 \times 101}$?

- Ans**
- ☐ 1. 101/102
 - ☐ 2. 99/100
 - ☒ 3. 100/101
 - ☐ 4. 99/101

Q.14 If Selling price of an article is Rs. 2400 and Marked price is Rs. 3000. What is the discount percentage?

- Ans**
- ☐ 1. 25
 - ☐ 2. 15
 - ☐ 3. 30
 - ☒ 4. 20

Q.15 Anil can do a work in 80 days. What percent work of the total work can be done by Anil in 30 days?

- Ans**
- ☐ 1. 38 percent
 - ☐ 2. 40 percent
 - ☐ 3. 42 percent
 - ☒ 4. 37.5 percent

Q.16 The ratio of P, Q and R is 6 : 5 : 9 respectively. If their sum is 400, then what is the difference between P and R?

- Ans**
- ☒ 1. 60
 - ☐ 2. 70
 - ☐ 3. 100
 - ☐ 4. 80

Q.17 The average age of a group of 11 men is 53 years. 2 men leave the group and the average age of group increases by 1 year. What is the average age of 2 men who left the group?

- Ans**
- ☒ 1. 48.5 years
 - ☐ 2. 49 years
 - ☐ 3. 51 years
 - ☐ 4. 53 years

Q.18 How many two digit numbers are there which are divisible by 8?

- Ans**
- ☒ 1. 11
 - ☐ 2. 12
 - ☐ 3. 13
 - ☐ 4. 10

Q.19 In a smoothie recipe, the ratio of fruits to yogurt is 5:2, and the ratio of yogurt to honey is 3:1. What is the ratio of fruits to honey in the recipe?

- Ans**
- ☐ 1. 2 : 11
 - ☐ 2. 16 : 3
 - ☐ 3. 3 : 14
 - ☒ 4. 15 : 2

Q.20 A person walks at a speed of 6 km/h and covers a certain distance in 4 hours. If the person increases the speed to 8 km/h, how long will it take to cover the same distance?

- Ans**
- ☐ 1. 2 hours
 - ☐ 2. 5 hours
 - ☒ 3. 3 hours
 - ☐ 4. 4.5 hours

Q.1 Select the most appropriate word to fill in the blank.

_____! Watch out for that hole.

- Ans
- ☐ 1. Amen
 - ☐ 2. Yay
 - ☐ 3. Tut
 - ☒ 4. Hey

Q.2 Select the most appropriate option for the given blank.

Your brother _____ an apology to me.

- Ans
- ☒ 1. owes
 - ☐ 2. drops
 - ☐ 3. abates
 - ☐ 4. owns

Q.3 Find the part of the given sentence that has an error in it. If there is no error, choose 'No error'.

We believe that visiting Shimla is the better therapy for you.

- Ans
- ☒ 1. the better therapy for you.
 - ☐ 2. No error
 - ☐ 3. We believe that
 - ☐ 4. visiting Shimla is

Q.4 Find the part of the given sentence that has an error in it. If there is no error, choose 'No error'.

Please distribute these balloons between all the candidates.

- Ans
- ☐ 1. all the candidates.
 - ☐ 2. No error
 - ☐ 3. Please distribute
 - ☒ 4. these balloons between

Q.5 Improve the underlined part of the sentence. Choose 'No improvement' as an answer if the sentence is grammatically correct.

I read the directions, but I still can't figured out how it works.

- Ans
- ☒ 1. figure out
 - ☐ 2. figuring out
 - ☐ 3. figures off
 - ☐ 4. No improvement

Q.6 Choose the most appropriate antonym of the underlined word.

That missing context can often lead to separate interpretations by different readers or viewers.

- Ans
- ☐ 1. Analysis
 - ☐ 2. Insight
 - ☒ 3. Ignorance
 - ☐ 4. Explanation

Q.7 Select the incorrectly spelt word from the given sentence.

According to the Finance Minister, this will provide the digital economy a new demension.

- Ans
- ☐ 1. provide
 - ☐ 2. According
 - ☒ 3. demension
 - ☐ 4. economy

Q.8 The sentence has been divided into three parts, identify the segment which contains a spelling error in the sentence given below. Choose no error if there is no error in the sentence.

The renowned chef, known for his innovative cullinary/ creations, opened a new restaurant that quickly became/ a hotspot for food enthusiasts seeking a unique dining experience.

- Ans
- ☐ 1. no error
 - ☐ 2. creations, opened a new restaurant that quickly became
 - ☒ 3. The renowned chef, known for his innovative cullinary
 - ☐ 4. a hotspot for food enthusiasts seeking a unique dining experience.

Q.9 In the following question, out of the given four alternatives, select the alternative which best expresses the meaning of the Idiom/Phrase.

To turn a deaf ear to

- Ans
- ☐ 1. To have an ear ache
 - ☐ 2. To get into trouble
 - ☒ 3. To refuse to listen and consider
 - ☐ 4. To become deaf

Q.10 Select the most appropriate antonym of the given word.

Investment

- Ans
- ☐ 1. Outline
 - ☒ 2. Divestment
 - ☐ 3. Endowment
 - ☐ 4. Goody

Q.11 Fill in the blank with the most appropriate option.

He had always liked this mosque, it was gracious, and the arrangement _____ him.

- Ans
- ☒ 1. dissatisfied
 - ☒ 2. pleased
 - ☒ 3. happy
 - ☒ 4. bothered

Q.12 Select the most appropriate word to fill in the blank.

_____ his previous start-ups have failed.

- Ans
- ☒ 1. Little
 - ☒ 2. Quite
 - ☒ 3. Very
 - ☒ 4. All

Q.13 Choose the most appropriate synonym of the underlined word.

Visitors board the train and wind their way through its corridors and lavish decor.

- Ans
- ☒ 1. Mundane
 - ☒ 2. Affluent
 - ☒ 3. Destitute
 - ☒ 4. Regular

Q.14 Select the most appropriate word to fill in the blank.

The trio of women at the table _____ representative of the enormous flux of American life.

- Ans
- ☒ 1. had being
 - ☒ 2. was
 - ☒ 3. has been
 - ☒ 4. were

Q.15 Choose the idiom/phrase that can substitute the highlighted group of words meaningfully.

All the boys of Shemrock are **similar in many ways**.

- Ans
- ☒ 1. Flocking birds
 - ☒ 2. Eats like a bird
 - ☒ 3. A piece of cake
 - ☒ 4. Birds of a feather

Comprehension:

Read the passage carefully and select the correct answer for the given blanks out of the four alternatives.

Chimpanzees awaken at dawn, and their day is spent (1)_____ in the trees and on the ground. After a lengthy midday rest, late afternoon is usually the most intensive feeding (2) _____. In the trees, where most feeding takes place, chimps use their hands and feet to move (3) _____. They also leap and swing by their arms (brachiate) skilfully from branch to branch. Movement over any significant distance usually takes (4)_____ on the ground. Though able to walk upright, chimpanzees more often move about on all fours, (5)_____ forward on the knuckles of their hands (knuckle walking).

SubQuestion No : 16

Q.16 Select the most appropriate option for blank (1)

- Ans
- ☐ 1. either
 - ☐ 2. neither
 - ☐ 3. all
 - ☒ 4. both

Comprehension:

Read the passage carefully and select the correct answer for the given blanks out of the four alternatives.

Chimpanzees awaken at dawn, and their day is spent (1)_____ in the trees and on the ground. After a lengthy midday rest, late afternoon is usually the most intensive feeding (2) _____. In the trees, where most feeding takes place, chimps use their hands and feet to move (3) _____. They also leap and swing by their arms (brachiate) skilfully from branch to branch. Movement over any significant distance usually takes (4)_____ on the ground. Though able to walk upright, chimpanzees more often move about on all fours, (5)_____ forward on the knuckles of their hands (knuckle walking).

SubQuestion No : 17

Q.17 Select the most appropriate option for blank (2)

- Ans
- ☐ 1. era
 - ☒ 2. period
 - ☐ 3. movement
 - ☐ 4. group

Comprehension:

Read the passage carefully and select the correct answer for the given blanks out of the four alternatives.

Chimpanzees awaken at dawn, and their day is spent (1)_____ in the trees and on the ground. After a lengthy midday rest, late afternoon is usually the most intensive feeding (2) _____. In the trees, where most feeding takes place, chimps use their hands and feet to move (3) _____. They also leap and swing by their arms (brachiate) skilfully from branch to branch. Movement over any significant distance usually takes (4)_____ on the ground. Though able to walk upright, chimpanzees more often move about on all fours, (5)_____ forward on the knuckles of their hands (knuckle walking).

SubQuestion No : 18

Q.18 Select the most appropriate option for blank (3)

- Ans
- ☐ 1. over
 - ☐ 2. of
 - ☐ 3. along
 - ☒ 4. about

Comprehension:

Read the passage carefully and select the correct answer for the given blanks out of the four alternatives.

Chimpanzees awaken at dawn, and their day is spent (1)_____ in the trees and on the ground. After a lengthy midday rest, late afternoon is usually the most intensive feeding (2) _____. In the trees, where most feeding takes place, chimps use their hands and feet to move (3) _____. They also leap and swing by their arms (brachiate) skilfully from branch to branch. Movement over any significant distance usually takes (4)_____ on the ground. Though able to walk upright, chimpanzees more often move about on all fours, (5)_____ forward on the knuckles of their hands (knuckle walking).

SubQuestion No : 19

Q.19 Select the most appropriate option for blank (4)

- Ans
- ☐ 1. spot
 - ☒ 2. place
 - ☐ 3. part
 - ☐ 4. over

Comprehension:

Read the passage carefully and select the correct answer for the given blanks out of the four alternatives.

Chimpanzees awaken at dawn, and their day is spent (1)_____ in the trees and on the ground. After a lengthy midday rest, late afternoon is usually the most intensive feeding (2) _____. In the trees, where most feeding takes place, chimps use their hands and feet to move (3) _____. They also leap and swing by their arms (brachiate) skilfully from branch to branch. Movement over any significant distance usually takes (4)_____ on the ground. Though able to walk upright, chimpanzees more often move about on all fours, (5)_____ forward on the knuckles of their hands (knuckle walking).

SubQuestion No : 20

Q.20 Select the most appropriate option for blank (5)

- Ans
- ☐ 1. ragging
 - ☒ 2. leaning
 - ☐ 3. making
 - ☐ 4. stalling

Section : Part-D-Hindi

Q.1 निम्नलिखित प्रश्न में, चार विकल्पों में से, उस सही विकल्प का चयन करें जो वाक्यांशों के लिए एक शब्द का विकल्प हो। दूसरों के दोष को खोजने वाला

- Ans
- ☐ 1. अनुचर
 - ☐ 2. हस्तक्षेप
 - ☐ 3. त्रासदी
 - ☒ 4. छिद्रान्वेषी

Q.2 दिए गए वाक्य में रेखांकित शब्द का तद्वत शब्द ज्ञात कीजिए।

वर-बधू मंडप में बैठ गए हैं।

- Ans
- ☐ 1. बेटी
 - ☐ 2. दुल्हा
 - ☐ 3. लोग
 - ☒ 4. दुल्हन

Q.3 दिए गए वाक्य में उचित पर्यायवाची शब्द का चयन करके रिक्त स्थान की पूर्ति करें।

भारत में _____ (विभिन्न) प्रकार के लोग हैं।

- Ans
- ☐ 1. तन-तन
 - ☒ 2. भिन्न-भिन्न
 - ☐ 3. आयुध
 - ☐ 4. अङ्गचन

Q.4 निम्नलिखित प्रश्न में, चार विकल्पों में से, उस विकल्प का चयन करें जो कोष्ठक में दिए गए शब्द के तद्वत रूप का सही विकल्प है।
हम खाने में हमेशा (अम्लिका) _____ का उपयोग करते हैं।

- Ans
- ☐ 1. हल्दी
 - ☒ 2. इमली
 - ☐ 3. अचार
 - ☐ 4. आँवले

Q.5 दिए गए वाक्य में रेखांकित शब्दों के लिए सही शब्दों वाले विकल्प का चयन करें।

कई दिनों के पीछे आज धूप आई है।

- Ans
- ☐ 1. कई दिनों के बदले आज धूप आई है।
 - ☒ 2. कई दिनों के बाद आज धूप आई है।
 - ☐ 3. परिवर्तन की आवश्यकता नहीं है।
 - ☐ 4. कई दिनों के आगे आज धूप आई है।

Q.6 निम्नलिखित प्रश्न में, दिए गए चार विकल्पों में से, उस विकल्प का चयन करें जो दिए गए मुहावरे के अर्थ को सर्वश्रेष्ठ रूप से व्यक्त करता है।

पापड़ बेलना

- Ans
- ✓ 1. सफलता प्राप्ति के उद्देश्य से हर प्रयास करना
 - ✗ 2. काम निकलने के लिए चापलूसी करना
 - ✗ 3. चालाकी दिखाकर काम निकालना
 - ✗ 4. बेवजह व्यर्थ का परिश्रम करना

Q.7 निम्नलिखित प्रश्न में, चार विकल्पों में से, उस विकल्प का चयन करें जो दी गई लोकोक्ति का सही अर्थ वाला विकल्प है।
सहज पके सो मीठा होय

- Ans
- ✗ 1. अनिश्चय की स्थिति में करने पर सफलता नहीं मिलती
 - ✗ 2. थोड़ा-सा शेष रहना
 - ✓ 3. धीरे-धीरे कार्य में लगे रहने से परिणाम अच्छा मिलता है
 - ✗ 4. तुरन्त मजदूरी मिलने पर कार्य भी अच्छा होता है

Q.8 दिए गए वाक्य का वह भाग ज्ञात करें, जिसमें कोई त्रुटि है। यदि कोई त्रुटि नहीं है, तो 'कोई त्रुटि नहीं है' चुनें।
जो भी इससे भिड़ेगा जो ही इसे हरा देगा।

- Ans
- ✗ 1. कोई त्रुटि नहीं है
 - ✗ 2. इसे हरा देगा।
 - ✗ 3. जो भी इससे
 - ✓ 4. भिड़ेगा जो ही

Q.9 दिए गए वाक्य में उचित पर्यायवाची शब्द का चयन करके रिक्त स्थान की पूर्ति करें।

यही _____ (ठीक) होगा कि उसे घर भेज दिया जाए।

- Ans
- ✗ 1. इति
 - ✗ 2. नृप
 - ✗ 3. पवित्र
 - ✓ 4. उपयुक्त

Q.10 दिए गए विकल्पों में से तीन विकल्प शुद्ध वर्तनी वाले हैं, जबकि एक अशुद्ध वर्तनी वाला है। उस अशुद्ध वर्तनी वाले विकल्प का चयन करें।

- Ans
- ✗ 1. माँ से प्यारा शब्द भला और क्या ही है।
 - ✗ 2. दादा जी के पैरों में दर्द है।
 - ✓ 3. उसे तो सवदेश ही प्यारा है।
 - ✗ 4. पेट में गैस हो गई है।

Q.11 दिए गए वाक्य का वह भाग ज्ञात करें, जिसमें कोई त्रुटि है।
व्यक्ति को अपने समय का अच्छा सदुपयोग करना चाहिए।

- Ans
- ✗ 1. व्यक्ति को
 - ✓ 2. अच्छा सदुपयोग
 - ✗ 3. करना चाहिए।
 - ✗ 4. अपने समय का

Q.12 दिए गए वाक्य में रेखांकित शब्द का विलोम शब्द ज्ञात कीजिए।
बेगम अपने सेवकों के साथ आ रही है।

- Ans
- ✗ 1. राजकुमार
 - ✗ 2. चाकर
 - ✗ 3. रानी
 - ✓ 4. बादशाह

Q.13 दिए गए वाक्य में रेखांकित शब्द के लिए सही वर्तनी ज्ञात कीजिए।
रहिम के दोहे बच्चे आज भी पढ़ते हैं।

- Ans
- ✓ 1. रहीम
 - ✗ 2. रहैम
 - ✗ 3. रिहम
 - ✗ 4. रहेम

Q.14 निम्नलिखित प्रश्न में, चार विकल्पों में से, उस विकल्प का चयन करें जो कोष्ठक में दिए गए शब्द के विलोम शब्द का सही अर्थ है।
बच्चियों से लेकर युवतियों तक को इस विषय का (प्रारंभिक) _____ ज्ञान देना अत्यंत आवश्यक है।

- Ans
- ✗ 1. ज्यादा
 - ✓ 2. अंतिम
 - ✗ 3. शुरुवाती
 - ✗ 4. मुख्य

Q.15 दिए गए वाक्यांश के लिए सार्थक शब्द ज्ञात कीजिए।

दो पहाड़ों के बीच का खाली स्थान

- Ans
- ☐ 1. जमीन
 - ☐ 2. ढलान
 - ☐ 3. पर्वत
 - ☒ 4. घाटी

Comprehension:

नीचे दिए गए गद्य में कुछ शब्द छोड़ दिए गए हैं और प्रत्येक रिक्त स्थान के चार विकल्प दिए गए हैं। इन चारों में से कौन सा विकल्प रिक्त स्थान की पूर्ति करेगा-
कार्तिक कृष्ण अमावस्या को दीपावली (1)_____ है। इस (2)_____ से लोग दिवाली मनाते हैं कि राम का अयोध्या में (3)_____ हुआ है और (4)_____ में दीप जलाए गए हैं। उनका (5)_____ राज्याभिषेक हुआ और लोग घर-घर में दीप जलाते हैं।

SubQuestion No : 16

Q.16 रिक्त 1 के लिए सबसे उपयुक्त विकल्प का चयन कीजिए।

- Ans
- ☒ 1. पड़ती
 - ☐ 2. चलती
 - ☐ 3. उठती
 - ☐ 4. पढ़ती

Comprehension:

नीचे दिए गए गद्य में कुछ शब्द छोड़ दिए गए हैं और प्रत्येक रिक्त स्थान के चार विकल्प दिए गए हैं। इन चारों में से कौन सा विकल्प रिक्त स्थान की पूर्ति करेगा-
कार्तिक कृष्ण अमावस्या को दीपावली (1)_____ है। इस (2)_____ से लोग दिवाली मनाते हैं कि राम का अयोध्या में (3)_____ हुआ है और (4)_____ में दीप जलाए गए हैं। उनका (5)_____ राज्याभिषेक हुआ और लोग घर-घर में दीप जलाते हैं।

SubQuestion No : 17

Q.17 रिक्त 2 के लिए सबसे उपयुक्त विकल्प का चयन कीजिए।

- Ans
- ☐ 1. मान
 - ☒ 2. भाव
 - ☐ 3. मालूम
 - ☐ 4. भयभीत

Comprehension:

नीचे दिए गए गद्या में कुछ शब्द छोड़ दिए गए हैं और प्रत्येक रिक्त स्थान के चार विकल्प दिए गए हैं। इन चारों में से कौन सा विकल्प रिक्त स्थान की पूर्ति करेगा-
कार्तिक कृष्ण अमावस्या को दीपावली (1)_____ है। इस (2)_____ से लोग दिवाली मनाते हैं कि राम का अयोध्या में (3)_____ हुआ है और (4)_____ में दीप जलाए गए हैं। उनका (5)_____ राज्याभिषेक हुआ और लोग घर-घर में दीप जलाते हैं।

SubQuestion No : 18

Q.18 रिक्त 3 के लिए सबसे उपयुक्त विकल्प का चयन कीजिए।

- Ans
- ☐ 1. बातचीत
 - ☐ 2. अनुभव
 - ☐ 3. पांव
 - ☒ 4. राज्याभिषेक

Comprehension:

नीचे दिए गए गद्या में कुछ शब्द छोड़ दिए गए हैं और प्रत्येक रिक्त स्थान के चार विकल्प दिए गए हैं। इन चारों में से कौन सा विकल्प रिक्त स्थान की पूर्ति करेगा-
कार्तिक कृष्ण अमावस्या को दीपावली (1)_____ है। इस (2)_____ से लोग दिवाली मनाते हैं कि राम का अयोध्या में (3)_____ हुआ है और (4)_____ में दीप जलाए गए हैं। उनका (5)_____ राज्याभिषेक हुआ और लोग घर-घर में दीप जलाते हैं।

SubQuestion No : 19

Q.19 रिक्त 4 के लिए सबसे उपयुक्त विकल्प का चयन कीजिए।

- Ans
- ☐ 1. दूर-पास
 - ☐ 2. कही-कही
 - ☐ 3. हर-हर
 - ☒ 4. घर-घर

Comprehension:

नीचे दिए गए गद्या में कुछ शब्द छोड़ दिए गए हैं और प्रत्येक रिक्त स्थान के चार विकल्प दिए गए हैं। इन चारों में से कौन सा विकल्प रिक्त स्थान की पूर्ति करेगा-
कार्तिक कृष्ण अमावस्या को दीपावली (1)_____ है। इस (2)_____ से लोग दिवाली मनाते हैं कि राम का अयोध्या में (3)_____ हुआ है और (4)_____ में दीप जलाए गए हैं। उनका (5)_____ राज्याभिषेक हुआ और लोग घर-घर में दीप जलाते हैं।

SubQuestion No : 20

Q.20 रिक्त 5 के लिए सबसे उपयुक्त विकल्प का चयन कीजिए।

- Ans
- ☐ 1. शब्दहीन
 - ☐ 2. कर्तव्य
 - ☐ 3. लम्बा
 - ☒ 4. विधिवत