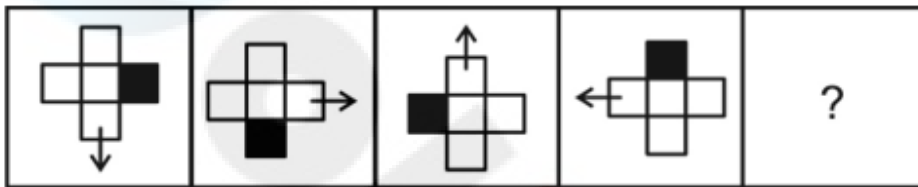


Constable GD in Central Armed Police Forces CAPFs SSF Rifleman GD in Assam Rifles Examination 2024

Exam Date	24/02/2024
Exam Time	2:30 PM - 3:30 PM
Subject	Constable GD Examination 2024

Section : Part-A-General Intelligence and Reasoning

Q.1 Select the figure that will replace the question mark (?) in the following figure series.



Ans

- 1.
- 2.
- 3.
- 4.

Q.2 Which of the following numbers will replace the question mark (?) in the given series?
9, 15, 27, 33, 45, ?

- 1. 63
- 2. 57
- 3. 51
- 4. 49


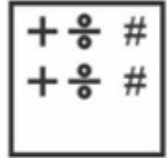

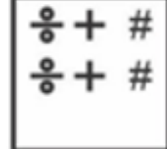
Q.3 In the following question, select the missing number from the given series.

40, 21, 22, 34, 69, ?

- Ans
- 1. 145.5
 - 2. 173
 - 3. 180
 - 4. 173.5

Q.4 In the following question, select the figure which can be placed at the sign of question mark (?) from the given alternatives.



- Ans
- 1. 
 - 2. 
 - 3. 
 - 4. 

Q.5 P, Q, R, S, T, U and V are sitting in a row facing North. U is to the immediate right of T. T is fourth to the right of V. R is the neighbour of Q and S. Person who is third to the left of S is at one of ends. Who is sitting on the immediate left of S?

- Ans
- 1. T
 - 2. V
 - 3. R
 - 4. Q

Q.6 Three Statements are given followed by two conclusions numbered I and II. Assuming the statements to be true, even if they seem to be at variance with commonly known facts, decide which of the conclusions logically follow(s) from the statements.

Statement I: All bicycles are wheels.

Statement II: Some wheels are rubber.

Statement III: No rubber is plastic.

Conclusion I: Some wheels are bicycles.

Conclusion II: Some wheels are plastics.

- Ans**
- 1. Only conclusion I follows
 - 2. Neither conclusion I nor II follows
 - 3. Both conclusions I and II follow
 - 4. Only conclusion II follows

Q.7 Which answer figure will complete the pattern in the question figure? (rotation is NOT allowed)



- Ans**
- 1.
 - 2.
 - 3.
 - 4.


Q.8 If $15A6B2C10 = 170$ and $8A5B4C50 = 110$, then $4A2B3C5 = ?$

- Ans
- ✓ 1. 19
 - ✗ 2. 30
 - ✗ 3. 35
 - ✗ 4. 40

Q.9 In a certain code language, 'VOCAL' is coded as '90327', 'WAVES' is coded as '31758', 'VOTED' is coded as '42631'. What is the code for 'E' in that code language?

- Ans
- ✓ 1. 1
 - ✗ 2. 5
 - ✗ 3. 3
 - ✗ 4. 7

Q.10 A paper is folded and cut as shown below. How will it appear when unfolded?



- Ans
- ✓ 1.
 - ✗ 2.
 - ✗ 3.
 - ✗ 4.

Q.11 Which of the following letter will replace the question mark (?) in the given series?

J, E, A, X, V, ?

- Ans
- ✗ 1. T
 - ✗ 2. R
 - ✗ 3. S
 - ✓ 4. U

Q.12 In the following question, select the related letters from the given alternatives.

TWZ : SVY :: GJM : ?

- Ans
- 1. XZX
 - 2. ZUY
 - 3. ULM
 - 4. FIL

Q.13 Six students Aarav, Bhavya, Chetan, Diya, Esha, and Farhan are sitting in a circle facing the center.

Bhavya sits to the immediate right of Aarav. Diya is not sitting next to Aarav or Farhan. Esha, who is sitting to the immediate left of Farhan, is also sitting to the immediate right of Chetan. Who is the immediate neighbour of both Diya and Esha?

- Ans
- 1. Chetan
 - 2. Bhavya
 - 3. Farhan
 - 4. Aarav

Q.14 Arrange the given words in alphabetical order:

1. Tender
2. Thankful
3. Tactful
4. Tablespoon
5. Tasty

- Ans
- 1. 4,1,5,2,3
 - 2. 4,3,5,1,2
 - 3. 4,3,5,2,1
 - 4. 4,5,2,1,3

Q.15 Which of the following groups of letters when sequentially placed from left to right will complete the given series?

ghijkgh_jkghijkg_ijkghijk_hi_

- Ans
- 1. ihgj
 - 2. kijg
 - 3. ghgh
 - 4. ihjk

Q.16 'E × F' means 'E is the wife of F'

'E + F' means 'E is the brother of F'

'E ÷ F' means 'E is the husband of F'

'E - F' means 'E is the son of F'

How is J related to H in the expression 'G × H + I - J ÷ K'?

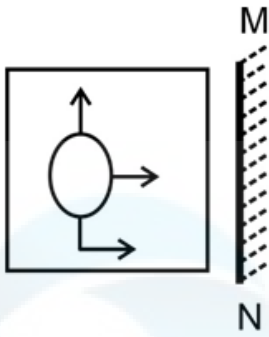
- Ans
- 1. Father
 - 2. Son
 - 3. Father's father
 - 4. Husband

Q.17 Select the option that is related to the fifth word in the same way as the fourth word is related to the third word and the second word is related to the first word.

Taj Mahal : Agra : : India Gate : New Delhi : : Gateway Of India : ?

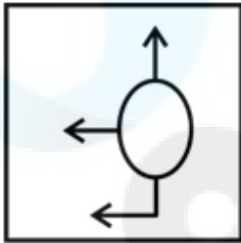
- Ans
- 1. Chennai
 - 2. Amritsar
 - 3. Bangalore
 - 4. Mumbai

Q.18 Select the correct mirror image of the given figure when the mirror MN is placed to the right side of the figure.

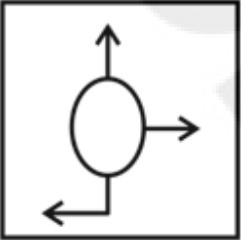


Ans

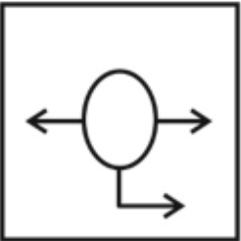
✓ 1.



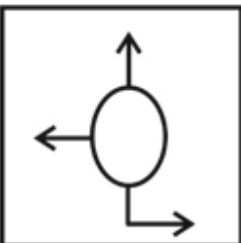
✗ 2.



✗ 3.



✗ 4.



Q.19 In a certain code language, if PERJURY is coded as '108', DECEPTION is coded as '86', then what will 'WITNESS' be coded as?

Ans

✓ 1. 104

✗ 2. 109

✗ 3. 92

✗ 4. 85

Q.20 By interchanging which two signs and two numbers the equation will be correct?

$$8 - 9 \times 4 \div 6 + 7 = 5$$

- Ans
- 1. + and -, 9 and 6
 - 2. + and -, 8 and 7
 - 3. \times and \div , 6 and 7
 - 4. \div and +, 8 and 7

Section : Part-B-General Knowledge and General awareness

Q.1 Which of the following is capital of People's Republic of China?

- Ans
- 1. Guangzhou
 - 2. Beijing
 - 3. Hangzhou
 - 4. Shanghai

Q.2 _____ remained the mainstay of the Green Revolution for years in India.

- Ans
- 1. Wheat
 - 2. Pulses
 - 3. Leafy Vegetable
 - 4. Cotton

Q.3 Kapil Dev lifted the 1983 World Cup (then known as the Prudential Cup '83) in the _____ stadium.

- Ans
- 1. Lord's
 - 2. Eden Gardens
 - 3. Holkar
 - 4. Green Park

Q.4 Pushkar Camel fair is associated with which of the following states?

- Ans
- 1. Rajasthan
 - 2. Maharashtra
 - 3. Gujarat
 - 4. Punjab

Q.5 Which instrument is played by Amjad Ali Khan?

- Ans
- 1. Sarod
 - 2. Sitar
 - 3. Santoor
 - 4. Guitar

Q.6 India's southern neighbours across the sea consist of the _____ island countries.

- Ans
- 1. three
 - 2. two
 - 3. four
 - 4. five

Q.7 Which type of expenditure refers to expenses that do not lead to the creation of physical or financial assets?

- Ans
- 1. Development Expenditure
 - 2. Capital Expenditure
 - 3. Fiscal Expenditure
 - 4. Revenue Expenditure

Q.8 Hockey India, under the Ministry of _____, is the governing body responsible for planning and implementing all activities related to men's and women's hockey in India.

- Ans
- 1. Games
 - 2. Education
 - 3. Youth Affairs and Sports
 - 4. Child Development

Q.9 The Green Revolution significantly increased crop yields and transformed Indian agriculture. What was one of its notable drawbacks?

- Ans
- 1. Reduced government investment
 - 2. Decreased food production
 - 3. Environmental degradation
 - 4. Limited use of chemical fertilizers

Q.10 The Harappans probably got copper from present-day of _____.

- Ans
- 1. Tamil Nadu
 - 2. Rajasthan
 - 3. Odisha
 - 4. Kerala

Q.11 Which city hosted the 2018 Asian games?

- Ans
- 1. Bangkok
 - 2. Tokyo
 - 3. Jakarta and Palembang
 - 4. Hangzhou

Q.12 As enshrined in article 168 of Constitution of India, there are two Houses of the Legislature of a State, one shall be known as the _____ and the other as the Legislative Assembly.

- Ans
- 1. House of the People
 - 2. State Council
 - 3. Council of States
 - 4. Legislative Council

Q.13 Right to property is a _____ under the Constitution of India.

- Ans
- 1. Constitutional Right
 - 2. Fundamental Right
 - 3. Directive Principle
 - 4. Non Constitutional Right

Q.14 As on June 2023, the Executive Directors of the World Bank selected Ajay Banga, as the _____ President of the World Bank for a five-year term.

- Ans
- 1. 14th
 - 2. 15th
 - 3. 13th
 - 4. 16th

Q.15 Who has been awarded the Global Indian Icon of the Year at the annual UK-India Awards in June, 2023?

- Ans
- 1. M.S. Dhoni
 - 2. Sakshi Malik
 - 3. Sunil Chetri
 - 4. Mary Kom

Q.16 _____ is a storytelling classical dance form from Andhra Pradesh.

- Ans
- 1. Kathak
 - 2. Sattriya
 - 3. Manipuri
 - 4. Kuchipudi

Q.17 Which of the following dancers of India won the Sangeet Natak Akademi Award for Folk and Tribal dance in the year 2018?

- Ans
- 1. Arjun Singh Dhurwey
 - 2. Gopika Varma
 - 3. Dr. Aruna Mohanty
 - 4. Tapan Kumar Pattanayak

Q.18 Government in Budget 2023-24 has made announcement of Pradhan Mantri PVTG Development Mission for implementing targeted schemes for socially and economically backward Scheduled tribes. Here PVTGs stands for:

- Ans**
- 1. Periodical Variable Tribal Groups
 - 2. Particularly Variable Tribal Groups
 - 3. Particularly Vulnerable Tribal Groups
 - 4. Periodical Vulnerable Tribal Groups

Q.19 How many horizontal rows are present in the modern periodic table?

- Ans**
- 1. 9
 - 2. 11
 - 3. 7
 - 4. 5

Q.20 Who renounced his knighthood on learning the Jallianwala Bagh massacre?

- Ans**
- 1. Rabindranath Tagore
 - 2. Subhas Chandra Bose
 - 3. Lala Lajpat Rai
 - 4. Mahatma Gandhi

Section : Part-C-Elementary Mathematics

Q.1 Price of 1 kg of tomato is increased by 120 percent and the increase is of Rs. 720. What is the new price of the tomato per kg?

- Ans**
- 1. Rs. 720
 - 2. Rs. 600
 - 3. Rs. 590
 - 4. Rs. 1320

Q.2 B1 and B2 together can complete a work in 20 days. B2 alone can complete the same work in 60 days. In how many days B1 alone can complete the same work?

- Ans**
- 1. 10 days
 - 2. 35 days
 - 3. 30 days
 - 4. 25 days

Q.3 What is that rate of simple interest at which a sum of money becomes three times of itself in 24 years?

- Ans**
- 1. 9.28 percent
 - 2. 10.28 percent
 - 3. 8.33 percent
 - 4. 8.68 percent

Q.4 The length and breadth of a cuboid are increased by 50 percent and 20 percent respectively. If its height is decreased by 30 percent, then what will be percentage increase in the volume of cuboid?

- Ans**
- 1. 30 percent
 - 2. 25 percent
 - 3. 26 percent
 - 4. 20 percent

Q.5 If $x : y = 3 : 5$ and $z : w = 2x : 5y$, then what is the value of $xz : yw$?

- Ans**
- 1. 18 : 125
 - 2. 19 : 75
 - 3. 18 : 75
 - 4. 18 : 65

Q.6 The marked price of an article is 250 percent of the cost price. If 50 percent discount is given, then what will be the profit percentage?

- Ans**
- 1. 25 percent
 - 2. 20 percent
 - 3. 10 percent
 - 4. 15 percent

Q.7 A bus left 60 minutes later than the scheduled time but in order to reach its destination 150 km away in time, it had to increase its usual speed by 5 km/hr. What is the usual speed of the bus?

- Ans**
- 1. 20 km/hr
 - 2. 15 km/hr
 - 3. 30 km/hr
 - 4. 25 km/hr

Q.8 The difference between cost price and selling price of a watch is Rs. 560. If profit percentage is 35 percent, then what is the selling price?

- Ans**
- 1. Rs. 2160
 - 2. Rs. 2240
 - 3. Rs. 2340
 - 4. Rs. 2200

Q.9 The radius of a hemisphere is 2.1 cm. What will be its volume?

- Ans**
- 1. 24.6 cm^3
 - 2. 15.7 cm^3
 - 3. 19.4 cm^3
 - 4. 17.5 cm^3

Q.10 The ratio of incomes of Anil and Vikas is 8 : 5. If Vikas gets Rs. 3000 less than Anil, then what is the total income of Anil and Vikas?

- Ans
- 1. Rs. 14000
 - 2. Rs. 13000
 - 3. Rs. 8000
 - 4. Rs. 5000

Q.11 Ramesh earns profit of Rs. 46 by selling an article for Rs. 236. What is the profit percentage?

- Ans
- 1. 30.03 percent
 - 2. 27.27 percent
 - 3. 24.21 percent
 - 4. 26.66 percent

Q.12 What is the Least Common Multiple of 120, 240 and 480?

- Ans
- 1. 480
 - 2. 1800
 - 3. 960
 - 4. 240

Q.13 In 25 consecutive natural numbers, the average of last 13 numbers is 39. What is the average of all 25 numbers?

- Ans
- 1. 37
 - 2. 34
 - 3. 33
 - 4. 31

Q.14 What is the value of $\frac{2}{1 \times 3} + \frac{2}{3 \times 5} + \frac{2}{5 \times 7} + \dots + \frac{2}{45 \times 47}$?

- Ans
- 1. 46/47
 - 2. 47/48
 - 3. 49/50
 - 4. 45/46

Q.15 Find the HCF of $\frac{27}{50}, \frac{9}{20}, \frac{6}{25}$.

- Ans
- 1. 68/7
 - 2. 47/5
 - 3. 56/5
 - 4. 3/100

Q.16 A principal is lent at a certain rate of compound interest (compounding annually). The amount at the end of 3 years is Rs. 13310 and at the end of 4 years is Rs. 14641. What is the principal?

- Ans
- 1. Rs. 14500
 - 2. Rs. 10700
 - 3. Rs. 12200
 - 4. Rs. 10000

Q.17 The average marks of 18 students was 190. But later it was found that the score of one student was wrongly entered as 46 instead of 64. What is the correct average of their score?

- Ans**
- 1. 192.27
 - 2. 193.4
 - 3. 191.25
 - 4. 191

Q.18 After working for 8 days, Payal finds that only 10 percent of the work is completed. She employs Pinky who is 50 percent more efficient than Payal. How many more days will they together take to complete the remaining work?

- Ans**
- 1. 25 days
 - 2. 28.8 days
 - 3. 27 days
 - 4. 30 days

Q.19 Find the greatest number which on dividing 60 and 90 leaves remainders 2 and 3 respectively.

- Ans**
- 1. 17
 - 2. 29
 - 3. 19
 - 4. 23

Q.20 What is the discount percentage offered on a book having marked price Rs. 3800 being sold at Rs. 2128?

- Ans**
- 1. 45 percent
 - 2. 50 percent
 - 3. 44 percent
 - 4. 56 percent

Section : Part-D-English

Q.1 Choose the correct word to complete the sentence:

I think Oka (rind strong-smelling cheese) is a bit too _____ for a cheese plate, as it can overpower the other selections.

- Ans**
- 1. bland
 - 2. pungent
 - 3. subtle
 - 4. insipid

Q.2 Identify the segment that contains a grammatical error. If there is no error, select 'No error'.

Running into Sonya's room and not finding her there, / Natasha ran to the nursery, / but Sonya was not there either.

- Ans**
- 1. Running into Sonya's room and not finding her there,
 - 2. Natasha ran to the nursery,
 - 3. but Sonya was not there either.
 - 4. No error

Q.3 Select the sentence with no spelling errors.

- Ans
- ✓ 1. This can impact negatively on family bonds.
 - ✗ 2. This can impact negatively on family baunds.
 - ✗ 3. This can impaact negatively on family bonds.
 - ✗ 4. This can impact negativly on family bonds.

Q.4 Choose the word that is opposite in meaning to the given word.

“Tame”

- Ans
- ✗ 1. Fealty
 - ✗ 2. Paradigm
 - ✓ 3. Wild
 - ✗ 4. Revisit

Q.5 In the following question, out of the given four alternatives, select the alternative which best expresses the meaning of the Idiom/Phrase.

Once in a blue moon

- Ans
- ✗ 1. Every time
 - ✗ 2. Out of nowhere
 - ✓ 3. Very rarely
 - ✗ 4. To see a moon

Q.6 Select the most appropriate word to fill in the blank.

The glass broke _____ pieces.

- Ans
- ✗ 1. at
 - ✗ 2. on
 - ✗ 3. over
 - ✓ 4. into

Q.7 Select the most appropriate meaning of the given idiom

Between a rock and a hard place

- Ans
- ✗ 1. Avoiding the main topic, not speaking directly about the issue
 - ✗ 2. On the point of achievement
 - ✓ 3. Stuck between two very bad options
 - ✗ 4. Willing to do anything

Q.8 Select the most appropriate antonym of the given word.

Accusation

- Ans
- 1. Blast
 - 2. Indictment
 - 3. Renumeration
 - 4. Approval

Q.9 Select the word segment that substitutes (replaces) the bracketed word segment correctly and completes the sentence meaningfully. Select the option 'no correction required' if the sentence is correct as given.

(On our reach at Denmark), we found the king and queen of that country elevated in two arm-chairs.

- Ans
- 1. On our approach at Denmark
 - 2. No correction required
 - 3. On our arrival in Denmark
 - 4. On our rival in Denmark

Q.10 Select the incorrectly spelt word from the given sentence.

Though this is undoutedly the greatest dictionary ever assembled, it is not designed for lexical analyser.

- Ans
- 1. designed
 - 2. Though
 - 3. dictionary
 - 4. undoutedly

Q.11 Find the part of the given sentence that has an error in it. If there is no error, choose 'No error'.

Supriya has much prettier face than Shilpa in our class.

- Ans
- 1. Supriya has much prettier
 - 2. No error
 - 3. Shilpa in our class.
 - 4. face than

Q.12 Choose the word that means the same as the given word.

Attack

- Ans
- 1. Dwindle
 - 2. Perform
 - 3. Bowl
 - 4. Assault

Q.13 Find the part of the given sentence that has an error in it. If there is no error, choose 'No error'.

No one may deny that Angelina was a devoted wife and mother.

- Ans
- 1. No one may deny
 - 2. that Angelina was a
 - 3. devoted wife and mother.
 - 4. No error

Q.14 Fill in the blank with the most appropriate option.

Of course it is. They just set around—_____, maybe, when there's a war.

- Ans
- 1. except
 - 2. expect
 - 3. accept
 - 4. assent

Q.15 Select the most appropriate word to fill in the blank.

Travel helps you become more broad-minded and you learn something new _____ you go.

- Ans
- 1. so
 - 2. wherever
 - 3. another
 - 4. whomever

Comprehension:

In the following passage some words have been deleted. Fill in the blanks with the help of the alternatives given. Select the most appropriate option for each number.

It was easy for me to find out, and I did soon (1) _____ out, that Drummle had begun to follow her (2) _____, and that she allowed him to do it. A (3) _____ while, and he was always in (4) _____ of her, and he and I (5) _____ one another every day.

SubQuestion No : 16

Q.16 Select the most appropriate option to fill in the blank No. 1.

- Ans
- 1. find
 - 2. discover
 - 3. detect
 - 4. gaze

Comprehension:

In the following passage some words have been deleted. Fill in the blanks with the help of the alternatives given. Select the most appropriate option for each number.

It was easy for me to find out, and I did soon (1) _____ out, that Drummle had begun to follow her (2) _____, and that she allowed him to do it. A (3) _____ while, and he was always in (4) _____ of her, and he and I (5) _____ one another every day.

SubQuestion No : 17

Q.17 Select the most appropriate option to fill in the blank No. 2.

- Ans**
- 1. firm
 - 2. sharpen
 - 3. closely
 - 4. intended

Comprehension:

In the following passage some words have been deleted. Fill in the blanks with the help of the alternatives given. Select the most appropriate option for each number.

It was easy for me to find out, and I did soon (1) _____ out, that Drummle had begun to follow her (2) _____, and that she allowed him to do it. A (3) _____ while, and he was always in (4) _____ of her, and he and I (5) _____ one another every day.

SubQuestion No : 18

Q.18 Select the most appropriate option to fill in the blank No. 3.

- Ans**
- 1. little
 - 2. petty
 - 3. small
 - 4. short

Comprehension:

In the following passage some words have been deleted. Fill in the blanks with the help of the alternatives given. Select the most appropriate option for each number.

It was easy for me to find out, and I did soon (1) _____ out, that Drummle had begun to follow her (2) _____, and that she allowed him to do it. A (3) _____ while, and he was always in (4) _____ of her, and he and I (5) _____ one another every day.

SubQuestion No : 19

Q.19 Select the most appropriate option to fill in the blank No. 4.

- Ans**
- 1. pursuit
 - 2. quest
 - 3. seeking
 - 4. perusal

Comprehension:

In the following passage some words have been deleted. Fill in the blanks with the help of the alternatives given. Select the most appropriate option for each number.

It was easy for me to find out, and I did soon (1) _____ out, that Drummle had begun to follow her (2) _____, and that she allowed him to do it. A (3) _____ while, and he was always in (4) _____ of her, and he and I (5) _____ one another every day.

SubQuestion No : 20

Q.20 Select the most appropriate option to fill in the blank No. 5.

- Ans**
- 1. acrossed
 - 2. meet
 - 3. crossed
 - 4. saw

Section : Part-D-Hindi

Q.1 निम्नलिखित प्रश्न में, चार विकल्पों में से, उस विकल्प का चयन करें जो रिक्त स्थान के लिए सही शब्द वाला विकल्प हो।

अवकाश साल का वो समय है जिसकी _____ से पूरे वर्ष प्रतीक्षा की जाती है।

- Ans**
- 1. निरुत्साह
 - 2. सभी
 - 3. प्रोत्साहन
 - 4. उत्सुकता

Q.2 दिए गए वाक्यांश के लिए सार्थक शब्द ज्ञात कीजिए।

जिसे व्याकरण का ज्ञान हो

- Ans**
- 1. लेखक
 - 2. भाष्य
 - 3. वैयाकरण
 - 4. अध्यापक

Q.3 निम्नलिखित प्रश्न में, चार विकल्पों में से, उस विकल्प का चयन करें जो कोष्ठक में दिए गए शब्द के पर्यायवाची शब्द का सही अर्थ नहीं है।

सरकार की विभिन्न योजनाओं के कारण कोई भी बच्चा शिक्षा के (अधिकार) _____ से वंचित नहीं हो सकता है।

- Ans**
- 1. हक
 - 2. पृथक
 - 3. अधिपत्य
 - 4. स्वामित्व

Q.4 निम्नलिखित प्रश्न में, दिए गए चार विकल्पों में से, उस विकल्प का चयन करें जो दिए गए मुहावरे के अर्थ को सर्वश्रेष्ठ रूप से व्यक्त करता है।

अपनी खिचड़ी अलग पकाना

- Ans
- ✓ 1. किसी की न मानना
 - ✗ 2. स्वार्थ सिद्ध करना
 - ✗ 3. महामूर्ख होना
 - ✗ 4. कुछ समझ न आना

Q.5 दिए गए वाक्य में रेखांकित शब्द के लिए सही वर्तनी ज्ञात कीजिए।

आज ब्याकरण की परीक्षा है।

- Ans
- ✗ 1. व्याकरण
 - ✗ 2. व्करण
 - ✗ 3. व्याकरड़
 - ✓ 4. व्याकरण

Q.6 दिए गए वाक्य में से निरर्थक शब्द ज्ञात कीजिए।

हमस नहीं हो पाएगा।

- Ans
- ✗ 1. नहीं
 - ✗ 2. हो
 - ✓ 3. हमस
 - ✗ 4. पाएगा

Q.7 निम्नलिखित प्रश्न में, चार विकल्पों में से, उस विकल्प का चयन करें जो कोष्ठक में दिए गए शब्द के विलोम शब्द का सही विकल्प है। वह बड़ा ही (निस्तेज) _____ बालक है। सभी सदैव उसकी तारीफ करते हैं।

- Ans
- ✓ 1. ओजस्वी
 - ✗ 2. निष्प्रभ
 - ✗ 3. कांतिहीन
 - ✗ 4. धीमा

Q.8 निम्नलिखित प्रश्न में, चार विकल्पों में से, उस विकल्प का चयन करें जो दी गई लोकोक्ति का सही अर्थ वाला विकल्प है।
अस्सी की आमद, चौरासी खर्च

- Ans
- ✓ 1. आमदनी से अधिक खर्च
 - ✗ 2. अपनी इज्जत अपने हाथ होती है
 - ✗ 3. मनुष्य को अपने कर्म के अनुसार ही फल मिलता है
 - ✗ 4. बेसहारे का सहारा

Q.9 दिए गए वाक्य में रेखांकित शब्दों के लिए सही शब्दों वाले विकल्प का चयन करें।

हत्यारे को मृत्युदंड की सजा मिल गई।

Ans

- ✓ 1. हत्यारे को मृत्युदंड मिल गया।
- ✗ 2. हत्यारे को मृत्युदंडित मिल गया।
- ✗ 3. परिवर्तन की आवश्यकता नहीं है।
- ✗ 4. हत्यारे को दंड की सजा मिल गई।

Q.10 दिए गए वाक्य का वह भाग ज्ञात करें, जिसमें कोई त्रुटि है।

देवता को एक फूलों की माला अर्पित कर वह वहां से चला गया।

Ans

- ✗ 1. से चला गया।
- ✗ 2. देवता को
- ✗ 3. अर्पित कर वह वहां
- ✓ 4. एक फूलों की माला

Q.11 दिए गए वाक्य में रेखांकित शब्द का विलोम शब्द ज्ञात कीजिए।

18 से कम उम्र का व्यक्ति बालिग कहलाता है।

Ans

- ✗ 1. पुत्री
- ✗ 2. जवान
- ✓ 3. नाबालिग
- ✗ 4. बच्चा

Q.12 दिए गए वाक्य में उचित विदेशज शब्द का चयन करके रिक्त स्थान की पूर्ति कीजिए।

राजू की नौकरी _____ पर लगी है।

Ans

- ✓ 1. सिफारिश
- ✗ 2. एतराज
- ✗ 3. अदालत
- ✗ 4. हाल

Q.13 दिए गए वाक्य में रेखांकित शब्द के लिए सही वर्तनी ज्ञात कीजिए।
इस कहानी का शीर्षक बताओ।

- Ans
- 1. क्षीर्षक
 - 2. शीर्षक
 - 3. क्षीर्षक
 - 4. षीर्षक

Q.14 निम्नलिखित प्रश्न में, चार विकल्पों में से, उस विकल्प का चयन करें जो रिक्त स्थान के लिए सही शब्द वाला विकल्प हो।
मानव एक विवेकशील और _____ प्राणी है।

- Ans
- 1. मननशील
 - 2. मानशील
 - 3. शील
 - 4. चिंतनशील

Q.15 दिए गए वाक्य का वह भाग ज्ञात करें, जिसमें कोई त्रुटि है।
शोक है कि आपने मेरे पत्र का उत्तर नहीं दिया।

- Ans
- 1. पत्र का
 - 2. शोक है कि
 - 3. उत्तर नहीं दिया
 - 4. आपने मेरे

Comprehension:

नीचे दिए गए गद्य में कुछ शब्द छोड़ दिए गए हैं और प्रत्येक रिक्त स्थान के चार विकल्प दिए गए हैं। इन चारों में से कौन सा विकल्प रिक्त स्थान की पूर्ति करेगा-

जब हम रोग के कारण के (1)_____ में सोचते हैं तब हमें यह याद रखना चाहिए कि इस कारण के बहुत से (2)_____ होते हैं। उनमें से एक संक्रमण है जो (3)_____ पानी पीने से आता है। बच्चों के लिए साफ पानी (4)_____ कराना जरूरी है। (5)_____ प्रकार के रोग होने के एक नहीं बल्कि बहुत से कारण होते हैं।

SubQuestion No : 16

Q.16 रिक्त 1 के लिए सबसे उपयुक्त विकल्प का चयन कीजिए।

- Ans
- 1. पुस्तक
 - 2. विषय
 - 3. भूल
 - 4. सहायक

Comprehension:

नीचे दिए गए गद्य में कुछ शब्द छोड़ दिए गए हैं और प्रत्येक रिक्त स्थान के चार विकल्प दिए गए हैं। इन चारों में से कौन सा विकल्प रिक्त स्थान की पूर्ति करेगा-

जब हम रोग के कारण के (1)_____ में सोचते हैं तब हमें यह याद रखना चाहिए कि इस कारण के बहुत से (2)_____ होते हैं। उनमें से एक संक्रमण है जो (3)_____ पानी पीने से आता है। बच्चों के लिए साफ पानी (4)_____ कराना जरूरी है। (5)_____ प्रकार के रोग होने के एक नहीं बल्कि बहुत से कारण होते हैं।

SubQuestion No : 17

Q.17 रिक्त 2 के लिए सबसे उपयुक्त विकल्प का चयन कीजिए।

- Ans**
- 1. गरीबी
 - 2. स्तर
 - 3. तत्काल
 - 4. विभिन्न

Comprehension:

नीचे दिए गए गद्य में कुछ शब्द छोड़ दिए गए हैं और प्रत्येक रिक्त स्थान के चार विकल्प दिए गए हैं। इन चारों में से कौन सा विकल्प रिक्त स्थान की पूर्ति करेगा-

जब हम रोग के कारण के (1)_____ में सोचते हैं तब हमें यह याद रखना चाहिए कि इस कारण के बहुत से (2)_____ होते हैं। उनमें से एक संक्रमण है जो (3)_____ पानी पीने से आता है। बच्चों के लिए साफ पानी (4)_____ कराना जरूरी है। (5)_____ प्रकार के रोग होने के एक नहीं बल्कि बहुत से कारण होते हैं।

SubQuestion No : 18

Q.18 रिक्त 3 के लिए सबसे उपयुक्त विकल्प का चयन कीजिए।

- Ans**
- 1. एसिड
 - 2. साफ
 - 3. दूषित
 - 4. जीव

Comprehension:

नीचे दिए गए गद्य में कुछ शब्द छोड़ दिए गए हैं और प्रत्येक रिक्त स्थान के चार विकल्प दिए गए हैं। इन चारों में से कौन सा विकल्प रिक्त स्थान की पूर्ति करेगा-

जब हम रोग के कारण के (1)_____ में सोचते हैं तब हमें यह याद रखना चाहिए कि इस कारण के बहुत से (2)_____ होते हैं। उनमें से एक संक्रमण है जो (3)_____ पानी पीने से आता है। बच्चों के लिए साफ पानी (4)_____ कराना जरूरी है। (5)_____ प्रकार के रोग होने के एक नहीं बल्कि बहुत से कारण होते हैं।

SubQuestion No : 19

Q.19 रिक्त 4 के लिए सबसे उपयुक्त विकल्प का चयन कीजिए।

- Ans**
- 1. पिलाना
 - 2. उपलब्ध
 - 3. गुनगुनाना
 - 4. वजन

Comprehension:

नीचे दिए गए गद्य में कुछ शब्द छोड़ दिए गए हैं और प्रत्येक रिक्त स्थान के चार विकल्प दिए गए हैं। इन चारों में से कौन सा विकल्प रिक्त स्थान की पूर्ति करेगा-

जब हम रोग के कारण के (1)_____ में सोचते हैं तब हमें यह याद रखना चाहिए कि इस कारण के बहुत से (2)_____ होते हैं। उनमें से एक संक्रमण है जो (3)_____ पानी पीने से आता है। बच्चों के लिए साफ पानी (4)_____ कराना जरूरी है। (5)_____ प्रकार के रोग होने के एक नहीं बल्कि बहुत से कारण होते हैं।

SubQuestion No : 20

Q.20

रिक्त 5 के लिए सबसे उपयुक्त विकल्प का चयन कीजिए।

Ans

- 1. उपचार
- 2. समुदाय
- 3. पौष्टिक
- 4. विभिन्न