

Constable GD in Central Armed Police Forces CAPFs SSF Rifleman GD in Assam Rifles Examination 2024

Exam Date	27/02/2024
Exam Time	9:00 AM - 10:00 AM
Subject	Constable GD Examination 2024

Section : Part-A-General Intelligence and Reasoning

Q.1 In a certain code language, 'YOUNG' is coded as '25796', 'WOULD' is coded as '80532', 'CANDY' is coded as '49163'. What can be the code for 'Y' in that code language?

- Ans
- 1. 7
 - 2. 2
 - 3. 9
 - 4. 5

Q.2 From the given option figures, select the one in which the question figure is hidden/embedded. (rotation is not allowed)



Ans

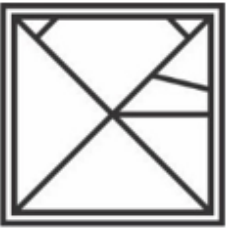
1.



2.



3.



4.



Q.3 A is the father of B. B is the brother of C. C is the husband of D. D is the sister of E. E is the mother of F. F is the daughter of G. How is D related to F?

- Ans**
- ☒ 1. Father
 - ☒ 2. Mother's sister
 - ☒ 3. Sister
 - ☒ 4. Mother

Q.4 Which letter should be in place of the question mark (?) in the following series?
M, G, L, H, K, I, J, J, ?

- Ans**
- ☒ 1. L
 - ☒ 2. I
 - ☒ 3. K
 - ☒ 4. O

Q.5 Five individuals P, Q, R, S, and T are seated at a circular table facing away from each other. R is to the immediate left of P. S is in between Q and R. Who is sitting to the immediate left of Q?

- Ans**
- ☒ 1. R
 - ☒ 2. S
 - ☒ 3. P
 - ☒ 4. T

Q.6 In a certain code language, 'HOST' is coded as '9724', 'KINDO' is coded as '45310', 'KNOWS' is coded as '37654'. What is the code for 'W' in that code language?

- Ans**
- ☒ 1. 5
 - ☒ 2. 4
 - ☒ 3. 7
 - ☒ 4. 6

Q.7 Select the option that is related to the fifth letter cluster in the same way as the fourth letter cluster is related to the third letter cluster and the second letter cluster is related to the first letter cluster.

PIG : OQHJFH :: KIN : JIJJMO :: LED : ?

- Ans**
- ☒ 1. KMDFCE
 - ☒ 2. MKFDEC
 - ☒ 3. ECFDMK
 - ☒ 4. CEDFKM

Q.8 Which of the following groups of letters when sequentially placed from left to right will complete the given series?

st_vwst_vwstuv_stuvstuvwstu_w

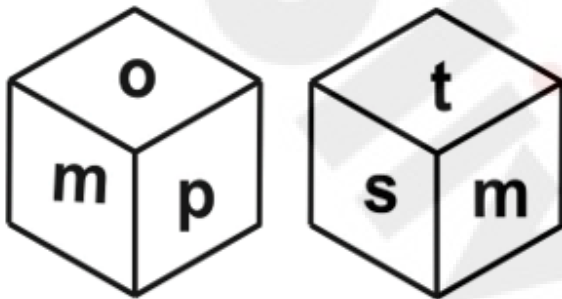
- Ans**
- ☒ 1. uwuv
 - ☒ 2. uuwv
 - ☒ 3. uuuv
 - ☒ 4. wuvu

Q.9 Arrange the given words in alphabetical order:

1. Response
2. Reporter
3. Reaction
4. Registration
5. Relevant

Ans ☒ 1. 2,5,1,3,4
☒ 2. 5,1,4,2,3
☒ 3. 3,4,5,2,1
☒ 4. 4,5,1,2,3

Q.10 Two different positions of the same dice are given below. Find the letter opposite of s.



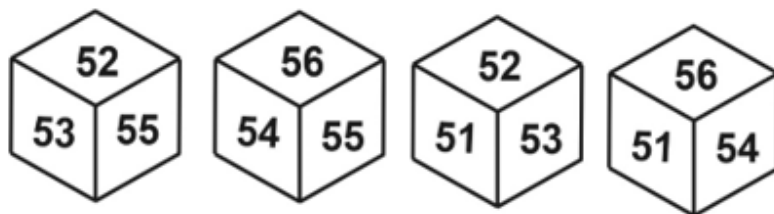
Ans ☒ 1. o
☒ 2. p
☒ 3. t
☒ 4. m

Q.11 In the following question, select the missing number from the given series.

5, 34, 1, 38, -3, ?

Ans ☒ 1. 40
☒ 2. 44
☒ 3. 47
☒ 4. 42

Q.12 Four different positions of the same dice are given below. Find the number opposite of 51.



Ans ☒ 1. 53
☒ 2. 55
☒ 3. 52
☒ 4. 54

Q.13 If $60 @ 35 \# 15 * 6 = -65$ and $40 @ 30 \# 6 * 7 = -32$, then

$$90 @ 10 \# 6 * 5 = ?$$

- Ans
- ☒ 1. 70
 - ☒ 2. 60
 - ☒ 3. 65
 - ☒ 4. 50

Q.14 In the following question, select the figure which can be placed at the sign of question mark (?) from the given alternatives.



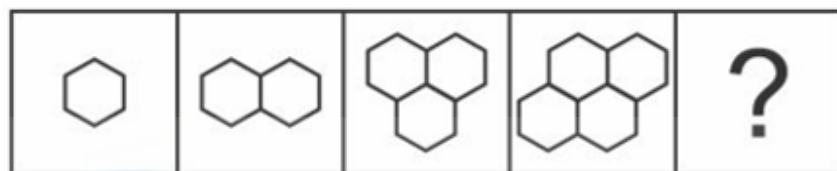
Ans

- ☒ 1.
- ☒ 2.
- ☒ 3.
- ☒ 4.

Q.15 P, Q, R, S, T, U and V are seven friends sitting in a single row facing North. S is to the immediate right of R. T and P are neighbours of U. Q is to the immediate left of R and on second place from left most end. P is at the right most end. Who is sitting on the immediate left of S?

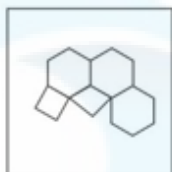
- Ans
- ☒ 1. R
 - ☒ 2. T
 - ☒ 3. Q
 - ☒ 4. U

Q.16 Select the figure that will replace the question mark (?) in the following figure series.

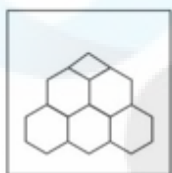


Ans

✗ 1.



✗ 2.



✗ 3.



✓ 4.



Q.17 By Interchanging the given two numbers which of the following equation will be correct?

5 and 9

Ans

✗ 1. $5 + 9 \times 2 - 3 = 18$

✓ 2. $5 - 9 + 6 = 10$

✗ 3. $5 - 3 + 9 = 4$

✗ 4. $5 + 3 \times 2 - 9 = 12$

Q.18 Select the option that is related to the third word in the same way as the second word is related to the first word.
New York : United States :: Sydney : ?

Ans

✗ 1. Japan

✗ 2. England

✓ 3. Australia

✗ 4. Canada

Q.19 Which of the following numbers will replace the question mark (?) in the given series?

165, ?, 195, 210, 225, 240

Ans

✓ 1. 180

✗ 2. 185

✗ 3. 192

✗ 4. 172

Q.20 In the following question below are given some statements followed by some conclusions based on those statements. Taking the given statements to be true even if they seem to be at variance from commonly known facts. Read all the conclusions and then decide which of the given conclusion(s) logically follows the given statements.

Statements:

I. All red are green.

II. Some pink are green.

Conclusions:

I. Some pink are not red.

II. All green are red.

III. Some green are red.

- Ans**
- ☐ 1. Both conclusions I and II follows
 - ☐ 2. All conclusion follows
 - ☐ 3. Neither conclusion follows
 - ☒ 4. Only conclusion III follows

Section : Part-B-General Knowledge and General awareness

Q.1 Which late veteran tribal leader of Tripura received the Padma Shri posthumously in 2023?

- Ans**
- ☐ 1. Sindhu Chandra Jamatia
 - ☐ 2. Bhaba Ranjan Reang
 - ☐ 3. Araber Rahaman
 - ☒ 4. Narendra Chandra Debbarma

Q.2 In which of the following years, NABARD sanctions Action Research Project to MYRADA?

- Ans**
- ☐ 1. 1981
 - ☒ 2. 1987
 - ☐ 3. 1985
 - ☐ 4. 1983

Q.3 Which country hosted the FIFA U-17 Women's World Cup 2022?

- Ans**
- ☐ 1. Nigeria
 - ☐ 2. Germany
 - ☒ 3. India
 - ☐ 4. Spain

Q.4 Which of the following is the reason for unemployment?

- Ans**
- ☐ 1. Good education system
 - ☒ 2. Large migration to a particular area
 - ☐ 3. Slow population growth
 - ☐ 4. Fast economic growth

Q.5 In Himachal Pradesh, which of the following is a floral festival?

- Ans
- ☐ 1. Baisakhi festival
 - ☐ 2. Doongri festival
 - ☐ 3. Chaitraul festival
 - ☒ 4. Phulaich festival

Q.6 Orunodoi 2.0 is launched by which of the following states?

- Ans
- ☐ 1. Jharkhand
 - ☐ 2. Rajasthan
 - ☐ 3. Manipur
 - ☒ 4. Assam

Q.7 Who is often referred to as the "Mother of Modern Bharatanatyam"?

- Ans
- ☐ 1. Mallika Sarabhai
 - ☒ 2. Rukmini Devi Arundale
 - ☐ 3. Sanjukta Panigrahi
 - ☐ 4. Mrinalini Sarabhai

Q.8 What was the primary purpose of the "Intensive Agricultural District Program (IADP)" launched during the Green Revolution in India?

- Ans
- ☐ 1. Implementing land reforms
 - ☐ 2. Promoting organic farming
 - ☒ 3. Increasing agricultural productivity in specific districts
 - ☐ 4. Boosting the cultivation of cash crops

Q.9 Article 126 of the Indian Constitution mentions _____.

- Ans
- ☒ 1. Appointment of acting Chief Justice of India
 - ☐ 2. Supreme Court to be a court of record
 - ☐ 3. Seat of Supreme Court
 - ☐ 4. Appointment of ad hoc Judges

Q.10 Which of the following sports is played by Dipika Pallikal Karthik?

- Ans
- ☐ 1. Cricket
 - ☒ 2. Squash
 - ☐ 3. Boxing
 - ☐ 4. Table Tennis

Q.11 Who of the following was one of the stalwarts of a renaissance in Koodiyattam?

- Ans
- ☐ 1. Makar Dhwaja Darogha
 - ☐ 2. P.K Kunju Kurup
 - ☐ 3. Amubi Singh
 - ☒ 4. Ammannur Madhava Chakyar

Q.12 Which of the following is the SI unit of temperature?

- Ans
- ☒ 1. Kelvin (K)
 - ☐ 2. Pascal (Pa)
 - ☐ 3. Fahrenheit (F)
 - ☐ 4. Celsius (°C)

Q.13 According to the 2011 Census of India, at all India level, the adult (15 + years) literacy rate is _____.

- Ans
- ☐ 1. 65.3 percent
 - ☐ 2. 73.3 percent
 - ☒ 3. 69.3 percent
 - ☐ 4. 63.3 percent

Q.14 Ustad Zakir Hussain plays _____.

- Ans
- ☒ 1. Tabla
 - ☐ 2. Sitar
 - ☐ 3. Guitar
 - ☐ 4. Santoor

Q.15 Who has been conferred with the Grand Cross of the Order of Honour by the President of Greece in August 2023?

- Ans
- ☐ 1. Piyush Goyal
 - ☒ 2. Narendra Modi
 - ☐ 3. Jagdeep Dhankhar
 - ☐ 4. Om Birla

Q.16 Proposed by Lord Lytton, then viceroy of India (governed 1876–80), the act was intended to prevent the vernacular press from expressing criticism of British policies—notably, the opposition that had grown with the outset of the Second _____ (1878–80).

- Ans
- ☒ 1. Anglo-Afghan War
 - ☐ 2. Portuguese-Afghan War
 - ☐ 3. Anglo-Mysore War
 - ☐ 4. Anglo-French War

Q.17 The wrestler must be at least _____ years old, and must be sponsored by the national federation, to compete at the World Championships or Olympic Games.

- Ans**
- ☒ 1. 25
 - ☒ 2. 21
 - ☒ 3. 17
 - ☒ 4. 23

Q.18 Complete the sentence. "Most of Ashoka's inscriptions _____."

- Ans**
- ☒ 1. were in Prakrit and were written in the Brahmi script
 - ☒ 2. were in Brahmi and were written in the Prakrit script
 - ☒ 3. were in Sanskrit and were written in the Brahmi script
 - ☒ 4. were in Prakrit and were written in the Devnagri script

Q.19 As of May 2022, which of the following is NOT a part of Article 19 of the Indian Constitution?

- Ans**
- ☒ 1. To assemble peaceably and without arms
 - ☒ 2. Right to Property
 - ☒ 3. To move freely throughout the territory of India
 - ☒ 4. To form associations or unions

Q.20 Which of the following is example of White Goods?

- Ans**
- ☒ 1. Air Conditioners and LED Lights
 - ☒ 2. Pharmacy products
 - ☒ 3. Imported items
 - ☒ 4. Agricultural equipment

Section : Part-C-Elementary Mathematics

Q.1 D alone can complete half of a work in 100 days. In 47 days what percentage of the work will be completed by D?

- Ans**
- ☒ 1. 23.5 percent
 - ☒ 2. 20.5 percent
 - ☒ 3. 21 percent
 - ☒ 4. 26.5 percent

Q.2 The difference between compound interest (compounding annually) and simple interest on a sum of Rs. 10,00,000 for 2 years is Rs. 2401. Find the rate of interest per annum.

- Ans**
- ☒ 1. 4.9%
 - ☒ 2. 6.1%
 - ☒ 3. 5.0%
 - ☒ 4. 5.2%

Q.3 By selling a cup for Rs. 1792 a man earns a profit of 12 percent. If he sells it for Rs. 1472, then what will be the loss percent?

- Ans**
- ✓ 1. 8 percent
 - ✗ 2. 12 percent
 - ✗ 3. 15 percent
 - ✗ 4. 6 percent

Q.4 What is the value of $8500 \div 5 + 24 \times 6 - 122 \times 3$?

- Ans**
- ✗ 1. 1214
 - ✗ 2. 1178
 - ✗ 3. 1532
 - ✓ 4. 1478

Q.5 The ratio of the present age of the two brothers is 11 : 13 and 6 years ago the ratio of their ages was 4 : 5. What will be the ratio of their ages after 5 years?

- Ans**
- ✗ 1. 22: 29
 - ✗ 2. 31: 34
 - ✓ 3. 27: 31
 - ✗ 4. 17: 19

Q.6 The average marks of 17 students was 180. But later it was found that the score of one student was wrongly entered as 72 instead of 27. What is the correct average of their score?

- Ans**
- ✗ 1. 183.36
 - ✗ 2. 178.98
 - ✓ 3. 177.35
 - ✗ 4. 180.25

Q.7 If p percent of p is 729, then what is the value of p?

- Ans**
- ✓ 1. 270
 - ✗ 2. 170
 - ✗ 3. 330
 - ✗ 4. 230

Q.8 Parallel sides of a trapezium are 15 cm and 16 cm and its area is 961 cm^2 . What is the distance between parallel sides?

- Ans**
- ✗ 1. 15.5 cm
 - ✗ 2. 93 cm
 - ✗ 3. 31 cm
 - ✓ 4. 62 cm

Q.9 The average of 5 consecutive numbers is 19. Find the largest of these numbers.

- Ans**
- ✗ 1. 23
 - ✗ 2. 29
 - ✓ 3. 21
 - ✗ 4. 17

Q.10 A man buys 15 mangoes for a rupee. How many mangoes had he sold for a rupee so that there is a loss of 25 percent?

- Ans
- ☐ 1. 17
 - ☒ 2. 20
 - ☐ 3. 38
 - ☐ 4. 28

Q.11 If $G : H = 3 : 7$, then what is the value of $G : (G + H)$?

- Ans
- ☐ 1. 10 : 3
 - ☐ 2. 6 : 7
 - ☒ 3. 3 : 10
 - ☐ 4. 3 : 7

Q.12 The simple interest received on a sum is $\frac{81}{100}$ of the sum. The number of years is equal to the annual rate of interest. What is the annual rate of interest?

- Ans
- ☐ 1. 12.5 percent
 - ☐ 2. 10.5 percent
 - ☒ 3. 9 percent
 - ☐ 4. 11 percent

Q.13 Amit is thrice as good a workman as Vinit and therefore is able to finish a work in 32 days less than Vinit. In how many days can they together complete the same work?

- Ans
- ☐ 1. 24 days
 - ☐ 2. 48 days
 - ☒ 3. 12 days
 - ☐ 4. 36 days

Q.14 Manav starts from a place A and reaches the place B in 29 hours. He travels $\frac{2}{9}$ distance at the speed of 9 km/hr and the remaining distance at the speed of 12 km/hr. What is the distance between A and B?

- Ans
- ☐ 1. 264 km
 - ☒ 2. 324 km
 - ☐ 3. 376 km
 - ☐ 4. 208 km

Q.15 A shirt is marked at ₹1200, and a discount of 15% is offered. Find the selling price of this shirt.

- Ans
- ☐ 1. Rs. 1290
 - ☐ 2. Rs. 1200
 - ☒ 3. Rs. 1020
 - ☐ 4. Rs. 1270

Q.16 What is the value of $22 \div (9 - 1 + 7 \times 2) + 24$ of 9?

- Ans
- ☐ 1. 215
 - ☐ 2. 216
 - ☒ 3. 217
 - ☐ 4. 218

Q.17 What is the value of $897 \div 13 + 15 \times 15 - 27$?

- Ans
- ☐ 1. 275
 - ☐ 2. 272
 - ☐ 3. 271
 - ☒ 4. 267

Q.18 Instead of increasing a number successively by 40 percent and 60 percent, it is decreased by 44 percent. Resultant value is what percentage of the required correct value?

- Ans
- ☐ 1. 20 percent
 - ☐ 2. 50 percent
 - ☒ 3. 25 percent
 - ☐ 4. 28 percent

Q.19 On Selling a watch at $\frac{3}{10}$ of the marked price there is a loss of 16 percent. What will be the ratio of the marked price and cost price of the watch?

- Ans
- ☐ 1. 7 : 4
 - ☐ 2. 8 : 5
 - ☒ 3. 14 : 5
 - ☐ 4. 19 : 8

Q.20 What is the value of $100 \times 10 - 100 + 3000 \div (100 \times 10)$?

- Ans
- ☐ 1. 970
 - ☐ 2. 1003
 - ☒ 3. 903
 - ☐ 4. 1030

Section : Part-D-English

Q.1 Select the incorrectly spelt word from the given sentence.

Kids who weren't restrained at all definitely suffered the consequences.

- Ans
- ☒ 1. definitely
 - ☐ 2. restrained
 - ☐ 3. suffered
 - ☐ 4. consequences

Q.2 Select the sentence with no spelling errors.

- Ans
- ☐ 1. Remember that intrnational travellers have to now get tested and quarantine after they land in the country.
 - ☐ 2. Remember that international travellers have to now get tested and quarentine after they land in the country.
 - ☒ 3. Remember that international travellers have to now get tested and quarantine after they land in the country.
 - ☐ 4. Remember that international travellers have to now get tested and quarantine after they land in the contry.

Q.3 Select the most appropriate antonym of the given word.

Intricate

- Ans
- ☐ 1. Harmony
 - ☒ 2. Simple
 - ☐ 3. Blocked
 - ☐ 4. Complex

Q.4 Find the part of the given sentence that has an error in it. If there is no error, choose 'No error'.

Sneha worked really harder for this event, but unfortunately it got cancelled.

- Ans
- ☐ 1. for this event, but
 - ☐ 2. No error
 - ☒ 3. Sneha worked really harder
 - ☐ 4. unfortunately it got cancelled

Q.5 Choose the most appropriate antonym of the underlined word

As children, I think things can be around you, but you really just retain the information that feels pertinent or important to you.

- Ans
- ☐ 1. Related
 - ☐ 2. Apt
 - ☒ 3. Irrelevant
 - ☐ 4. Proper

Q.6 Select the word segment that substitutes (replaces) the bracketed word segment correctly and completes the sentence meaningfully. Select the option 'no correction required' if the sentence is correct as given.

An hour later, a dog began to howl somewhere (in a farmhouse far down) the road.

- Ans
- ☒ 1. No correction required
 - ☐ 2. inside a farmhouse far downwards
 - ☐ 3. at farmhouse far up
 - ☐ 4. into a farmhouse far down

Q.7 Select the most appropriate word to fill in the blank.

I have already paid him more than _____.

- Ans
- ☐ 1. complete
 - ☒ 2. enough
 - ☐ 3. halves
 - ☐ 4. full

Q.8 Replace the bracketed word with one of the given options, which suitably replaces the word without changing the meaning of the sentence:

There are several ways to (mitigate) a blowout without losing control or playing soft.

- Ans**
- ☐ 1. spread
 - ☒ 2. allay
 - ☐ 3. aggravate
 - ☐ 4. intensify

Q.9 In the following question, out of the given four alternatives, select the alternative which best expresses the meaning of the Idiom/Phrase.

To mount the throne

- Ans**
- ☐ 1. To bring disgrace to the family
 - ☐ 2. To take the responsibility
 - ☒ 3. To become king, queen etc.
 - ☐ 4. To leave one's palace

Q.10 Choose the idiom/phrase that can substitute the highlighted group of words meaningfully.

Your action has **caused a lot of trouble** and now everyone has to face the repercussions.

- Ans**
- ☐ 1. In the dark
 - ☐ 2. In seventh heaven
 - ☒ 3. Stir a hornet's nest
 - ☐ 4. Break a leg

Q.11 Find the part of the given sentence that has an error in it. If there is no error, choose 'No error'.

The study has find an increasing correlation between social media usage and feelings of loneliness.

- Ans**
- ☐ 1. No error
 - ☒ 2. The study has find an increasing
 - ☐ 3. usage and feelings of loneliness.
 - ☐ 4. correlation between social media

Q.12 Replace the bracketed word with one of the given options, which suitably replaces the word without changing the meaning of the sentence:

The (famous) scientist made groundbreaking discoveries in the field of physics.

- Ans**
- ☐ 1. notorious
 - ☒ 2. renowned
 - ☐ 3. infamous
 - ☐ 4. unknown

Q.13 Choose the word that is opposite in meaning to the given word.

Cunning

- Ans
- ✓ 1. Simple
 - ✗ 2. Oblique
 - ✗ 3. Stealthy
 - ✗ 4. Guileful

Q.14 Choose the most appropriate synonym of the underlined word.

Only a rounded bar and three rotting bathtubs remain in the decrepit club.

- Ans
- ✗ 1. Robust
 - ✗ 2. Luxurious
 - ✗ 3. Hearty
 - ✓ 4. Wrecked

Q.15 Find the part of the given sentence that has an error in it. If there is no error, choose 'No error'.
He tried not to care and keeping marching forward.

- Ans
- ✗ 1. He tried not
 - ✓ 2. keeping marching forward.
 - ✗ 3. No error
 - ✗ 4. to care and

Comprehension:

In the given passage, four options are given for each blank. Select the most appropriate option to complete the given passage, which also fits contextually as per the word given in the bracket.

In the age of information technology, the internet has become an indispensable (1. boon) _____ in our daily lives. It offers a vast (2. stores) _____ of knowledge and a platform for global (3. transmissions) _____ and connectivity. However, this digital revolution also raises concerns about online (4. safety) _____ and privacy. It is essential for users to be (5. alert) _____ about their online activities and take steps to protect their personal information in this digital age.

SubQuestion No : 16

Q.16 Fill in the blank (1) with the appropriate word from the options below:

- Ans
- ✓ 1. asset
 - ✗ 2. barrier
 - ✗ 3. threat
 - ✗ 4. luxury

Comprehension:

In the given passage, four options are given for each blank. Select the most appropriate option to complete the given passage, which also fits contextually as per the word given in the bracket.

In the age of information technology, the internet has become an indispensable (1. boon) _____ in our daily lives. It offers a vast (2. stores) _____ of knowledge and a platform for global (3. transmissions) _____ and connectivity. However, this digital revolution also raises concerns about online (4. safety) _____ and privacy. It is essential for users to be (5. alert) _____ about their online activities and take steps to protect their personal information in this digital age.

SubQuestion No : 17

Q.17 Fill in the blank (2) with the appropriate word from the options below:

- Ans**
- ☐ 1. factory
 - ☐ 2. mandatory
 - ☒ 3. repository
 - ☐ 4. laboratory

Comprehension:

In the given passage, four options are given for each blank. Select the most appropriate option to complete the given passage, which also fits contextually as per the word given in the bracket.

In the age of information technology, the internet has become an indispensable (1. boon) _____ in our daily lives. It offers a vast (2. stores) _____ of knowledge and a platform for global (3. transmissions) _____ and connectivity. However, this digital revolution also raises concerns about online (4. safety) _____ and privacy. It is essential for users to be (5. alert) _____ about their online activities and take steps to protect their personal information in this digital age.

SubQuestion No : 18

Q.18 Fill in the blank (3) with the appropriate word from the options below:

- Ans**
- ☐ 1. contour
 - ☐ 2. concord
 - ☐ 3. conundrum
 - ☒ 4. communication

Comprehension:

In the given passage, four options are given for each blank. Select the most appropriate option to complete the given passage, which also fits contextually as per the word given in the bracket.

In the age of information technology, the internet has become an indispensable (1. boon) _____ in our daily lives. It offers a vast (2. stores) _____ of knowledge and a platform for global (3. transmissions) _____ and connectivity. However, this digital revolution also raises concerns about online (4. safety) _____ and privacy. It is essential for users to be (5. alert) _____ about their online activities and take steps to protect their personal information in this digital age.

SubQuestion No : 19

Q.19 Fill in the blank (4) with the appropriate word from the options below:

- Ans**
- ☒ 1. insecurity
 - ☒ 2. vigilance
 - ☒ 3. incursion
 - ☒ 4. security

Comprehension:

In the given passage, four options are given for each blank. Select the most appropriate option to complete the given passage, which also fits contextually as per the word given in the bracket.

In the age of information technology, the internet has become an indispensable (1. boon) _____ in our daily lives. It offers a vast (2. stores) _____ of knowledge and a platform for global (3. transmissions) _____ and connectivity. However, this digital revolution also raises concerns about online (4. safety) _____ and privacy. It is essential for users to be (5. alert) _____ about their online activities and take steps to protect their personal information in this digital age.

SubQuestion No : 20

Q.20 Fill in the blank (5) with the appropriate word from the options below:

- Ans**
- ☒ 1. wary
 - ☒ 2. absurd
 - ☒ 3. obscure
 - ☒ 4. oblivious

Section : Part-D-Hindi

Q.1 दिए गए वाक्य में रेखांकित शब्द का विलोम शब्द ज्ञात कीजिए।

शहरी व्यक्ति को अनेक लाभ मिलते हैं।

- Ans**
- ☒ 1. गुंडा
 - ☒ 2. गैरतदार
 - ☒ 3. गंभीर
 - ☒ 4. ग्रामीण

Q.2 निम्नलिखित प्रश्न में, दिए गए चार विकल्पों में से, उस विकल्प का चयन करें जो दिए गए मुहावरे के अर्थ को सर्वश्रेष्ठ रूप से व्यक्त करता है।

जहर उगलना

- Ans
- ✓ 1. कष्टदायक बातें कहना
 - ✗ 2. उल्टा जवाब देना
 - ✗ 3. पुरानी बातें याद करना
 - ✗ 4. मरते-मरते बचना

Q.3 निम्नलिखित वाक्य में, उस वाक्यांश को पहचानिए जिसमें मात्राओं से संबंधित अशुद्धियाँ हैं। यदि कोई गलती नहीं है तो 'कोई त्रुटि नहीं है' का चुनाव कीजिए।
रक्त संचार से पीड़ित रोगियों को जीवन की/ खतरनाक बीमारियों से लड़ने और गुणवत्ता वाले जीवन को/ जीने के लिए प्रोत्साहन मिलता है।

- Ans
- ✗ 1. जीने के लिए प्रोत्साहन मिलता है
 - ✗ 2. खतरनाक बीमारियों से लड़ने और गुणवत्ता वाले जीवन को
 - ✗ 3. रक्त संचार से पीड़ित रोगियों को जीवन की
 - ✓ 4. कोई त्रुटि नहीं है

Q.4 दिए गए वाक्य का वह भाग ज्ञात करें, जिसमें कोई त्रुटि है।

कल उनका बहुत भारी सम्मान हुआ और उन्हें पुरस्कार भी मिला।

- Ans
- ✗ 1. पुरस्कार भी मिला
 - ✗ 2. कल उनका बहुत
 - ✗ 3. और उन्हें
 - ✓ 4. भारी सम्मान हुआ

Q.5 निम्नलिखित प्रश्न में, चार विकल्पों में से, उस विकल्प का चयन करें जो कोष्ठक में दिए गए शब्द के पर्यायवाची शब्द का सही विकल्प नहीं है।

मेरे घर की (खिड़की) _____ से ठंडी-ठंडी हवा आती है।

- Ans
- ✓ 1. डोंडी
 - ✗ 2. गवाक्ष
 - ✗ 3. झरोखा
 - ✗ 4. वातायन

Q.6 निम्नलिखित प्रश्न में, चार विकल्पों में से, उस विकल्प का चयन करें जो कोष्ठक में दिए गए शब्द के तत्सम रूप का सही विकल्प है।
मैंने और मेरे परिवार के लोगों ने मिलकर मंदिर में आज रात की (आरती) _____ की।

- Ans
- ✓ 1. आरात्रिका
 - ✗ 2. आदित्यवार
 - ✗ 3. आच्छारी
 - ✗ 4. आमलक

Q.7 निम्नलिखित प्रश्न में, चार विकल्पों में से, उस विकल्प का चयन करें जो कोष्ठक में दिए गए शब्द के तद्भव रूप का सही विकल्प है।

लगता है बगल के तालाब से एक (कच्छप) _____ बाहर आ गया है।

- Ans
- ✗ 1. उल्लू
 - ✓ 2. कछुआ
 - ✗ 3. किवाड़
 - ✗ 4. गेंद

Q.8 निम्नलिखित वाक्य में रेखांकित भाग के लिए एक सार्थक शब्द ज्ञात कीजिए।

चमगादड़ रात में घूमने वाले जीवों में से ही एक है।

- Ans
- ✓ 1. निशाचर
 - ✗ 2. उभयचर
 - ✗ 3. नभचर
 - ✗ 4. स्थलचर

Q.9 निम्नलिखित प्रश्न में, चार विकल्पों में से, उस विकल्प का चयन करें जो कोष्ठक में दिए गए शब्द के पर्यायवाची शब्द का सही विकल्प नहीं है।

हमें हमेशा (बदमाश) _____ प्रवृत्ति के लोगों से दूरी बना के रखना चाहिए।

- Ans
- ✗ 1. दुर्जन
 - ✗ 2. खल
 - ✗ 3. पामर
 - ✓ 4. आखु

Q.10 निम्नलिखित प्रश्न में, दिए गए चार विकल्पों में से, उस विकल्प का चयन करें जो दिए गए मुहावरे के अर्थ को सर्वश्रेष्ठ रूप से व्यक्त करता है।

अपना घर समझना

- Ans
- ✗ 1. कुछ काम न करना
 - ✗ 2. सारा दिन सोते रहना
 - ✗ 3. कुछ भी कहना
 - ✓ 4. संकोच न करना

Q.11 निम्नलिखित वाक्य में, उस वाक्यांश को पहचानिए जिसमें अशुद्धियाँ हैं। यदि कोई गलती नहीं है तो 'कोई त्रुटि नहीं है' का चुनाव कीजिए।

बालश्रम जो कि बच्चों और बचपन के लिए अभिशाप बन/ गया है, उसे सिर्फ और सिर्फ तभी तोड़ा जा सकता है जब/ समाज के जागरूक लोग एक साथ मिलकर आगे आयें।

Ans

✓ 1. कोई त्रुटि नहीं है

✗ 2. गया है, उसे सिर्फ और सिर्फ तभी तोड़ा जा सकता है जब

✗ 3. समाज के जागरूक लोग एक साथ मिलकर आगे आयें

✗ 4. बालश्रम जो कि बच्चों और बचपन के लिए अभिशाप बन

Q.12 निम्नलिखित वाक्य में रेखांकित भाग के लिए एक सार्थक शब्द ज्ञात कीजिए।

अफ़शा बहुत अधिक खर्चा करती है।

Ans

✗ 1. मितव्यय

✓ 2. अपव्ययी

✗ 3. वाचाल

✗ 4. कंजूस

Q.13 दिए गए वाक्य में रेखांकित शब्द का विलोम शब्द ज्ञात कीजिए।

दिसंबर में आपकी हाजिरी जरूरी है।

Ans

✓ 1. गैरहाजिरी

✗ 2. वाजिब

✗ 3. मौजूदगी

✗ 4. प्रकटन

Q.14 दिए गए वाक्य का वह भाग ज्ञात करें, जिसमें कोई त्रुटि है।

राम कुछ देर पहले ही वापिस लौटकर आया है।

Ans

✗ 1. राम कुछ देर

✓ 2. वापिस लौटकर

✗ 3. पहले ही

✗ 4. आया है।

Q.15 दिए गए वाक्यांश के लिए सार्थक शब्द ज्ञात कीजिए।

जिसकी चार भुजायें हो

Ans

✗ 1. वृत्

✓ 2. चतुर्भुज

✗ 3. शंकु

✗ 4. चतूर्भुज

Comprehension:

नीचे दिए गए गद्य में कुछ शब्द छोड़ दिए गए हैं और प्रत्येक रिक्त स्थान के चार विकल्प दिए गए हैं। इन चारों में से कौन सा विकल्प रिक्त स्थान की पूर्ति करेगा-

लोक आस्था के (1)_____ छठ बिहार व दिल्ली सहित देश के (2)_____ हिस्सों में श्रद्धा और (3)_____ के साथ मनाया जा रहा है। पटना में पर्व के तीसरे दिन (4)_____ सूर्य को आर्ध्य देने के लिए घाटों पर आस्था का (5)_____ उमड़ पड़ा।

SubQuestion No : 16

Q.16 रिक्त (1) के लिए सबसे उपयुक्त विकल्प का चयन कीजिए।

Ans

✗ 1. महारानी

✓ 2. महापर्व

✗ 3. महाषय

✗ 4. महाराज

Comprehension:

नीचे दिए गए गद्य में कुछ शब्द छोड़ दिए गए हैं और प्रत्येक रिक्त स्थान के चार विकल्प दिए गए हैं। इन चारों में से कौन सा विकल्प रिक्त स्थान की पूर्ति करेगा-

लोक आस्था के (1)_____ छठ बिहार व दिल्ली सहित देश के (2)_____ हिस्सों में श्रद्धा और (3)_____ के साथ मनाया जा रहा है। पटना में पर्व के तीसरे दिन (4)_____ सूर्य को आर्ध्य देने के लिए घाटों पर आस्था का (5)_____ उमड़ पड़ा।

SubQuestion No : 17

Q.17 रिक्त (2) के लिए सबसे उपयुक्त विकल्प का चयन कीजिए।

Ans

✗ 1. संकठ

✗ 2. सेनापति

✓ 3. विभिन्न

✗ 4. स्वदेश

Comprehension:

नीचे दिए गए गद्य में कुछ शब्द छोड़ दिए गए हैं और प्रत्येक रिक्त स्थान के चार विकल्प दिए गए हैं। इन चारों में से कौन सा विकल्प रिक्त स्थान की पूर्ति करेगा-

लोक आस्था के (1)_____ छठ बिहार व दिल्ली सहित देश के (2)_____ हिस्सों में श्रद्धा और (3)_____ के साथ मनाया जा रहा है। पटना में पर्व के तीसरे दिन (4)_____ सूर्य को आर्ध्य देने के लिए घाटों पर आस्था का (5)_____ उमड़ पड़ा।

SubQuestion No : 18

Q.18

रिक्त (3) के लिए सबसे उपयुक्त विकल्प का चयन कीजिए।

Ans

- ☒ 1. कंठ
- ☒ 2. सहायता
- ☒ 3. शोक
- ☒ 4. उल्लास

Comprehension:

नीचे दिए गए गद्य में कुछ शब्द छोड़ दिए गए हैं और प्रत्येक रिक्त स्थान के चार विकल्प दिए गए हैं। इन चारों में से कौन सा विकल्प रिक्त स्थान की पूर्ति करेगा-

लोक आस्था के (1)_____ छठ बिहार व दिल्ली सहित देश के (2)_____ हिस्सों में श्रद्धा और (3)_____ के साथ मनाया जा रहा है। पटना में पर्व के तीसरे दिन (4)_____ सूर्य को आर्ध्य देने के लिए घाटों पर आस्था का (5)_____ उमड़ पड़ा।

SubQuestion No : 19

Q.19

रिक्त (4) के लिए सबसे उपयुक्त विकल्प का चयन कीजिए।

Ans

- ☒ 1. द्वादश
- ☒ 2. अस्ताचलगामी
- ☒ 3. अष्टमी
- ☒ 4. सप्तमी

Comprehension:

नीचे दिए गए गद्य में कुछ शब्द छोड़ दिए गए हैं और प्रत्येक रिक्त स्थान के चार विकल्प दिए गए हैं। इन चारों में से कौन सा विकल्प रिक्त स्थान की पूर्ति करेगा-

लोक आस्था के (1)_____ छठ बिहार व दिल्ली सहित देश के (2)_____ हिस्सों में श्रद्धा और (3)_____ के साथ मनाया जा रहा है। पटना में पर्व के तीसरे दिन (4)_____ सूर्य को आर्ध्य देने के लिए घाटों पर आस्था का (5)_____ उमड़ पड़ा।

SubQuestion No : 20

Q.20

रिक्त (5) के लिए सबसे उपयुक्त विकल्प का चयन कीजिए।

Ans

- ☒ 1. कल-परसो
- ☒ 2. जन-सैलाब
- ☒ 3. मनोवृत्ति
- ☒ 4. सगे-संबंधी