

Constable GD in CAPFs and SSF Rifleman GD in AR and Sepoy in NCB Examination 2025

Exam Date	10/02/2025
Exam Time	9:00 AM - 10:00 AM
Subject	Constable GD Examination 2025

Section : Part-A-General Intelligence and Reasoning

Q.1 Select the figure from among the given options that can replace the question mark (?) in the following series.

F	R	D	I	?
μ θ θ	μ μ	θ θ	μ	
k	d	m	b	

Ans

✗ 1.

R
μ θ
k

✗ 2.

D
θ μ
b

✗ 3.

R
μ θ
m

✓ 4.

J
μ θ
a

Q.2 RMDH is related to PKBF in a certain way based on the English alphabetical order. In the same way, SUGV is related to QSET. To which of the given options is MXKD related, following the same logic?

- Ans
- ✗ 1. OZMF
 - ✗ 2. KZIF
 - ✓ 3. KVIB
 - ✗ 4. OVMB

Q.3 In a certain code language, 'SKIP' is coded as '5269' and 'SILK' is coded as '2576'. How is 'L' coded in the given language?

- Ans**
- 1. 2
 - 2. 5
 - 3. 9
 - 4. 7

Q.4 Eight people are sitting in two parallel rows containing 4 people each in such a way that there is equal distance between adjacent persons.
In row 1, P, E, S and T are seated and all of them are facing south.
In row 2, M, O, L and D are seated and all of them are facing north.
Thus, each person faces another person from the other row.
O faces the one sitting to the immediate right of P. Only one person sits between O and D. Only two people sit between L and D. D faces the one sitting second to the left of T. E sits at some place to the right of S. Which of the following represents both people sitting at extreme ends of the rows?

- Ans**
- 1. T and O
 - 2. S and O
 - 3. E and D
 - 4. P and L

Q.5 Select the correct alternative that when filled in the blanks in the same sequence will make the series logically complete.

_URVQ_SWRW_XSXU_TYV_

- Ans**
- 1. PVTYZ
 - 2. PUTWZ
 - 3. OVSYX
 - 4. OUSWX

Q.6 What should come in place of the question mark (?) in the given series based on the English alphabetical order?

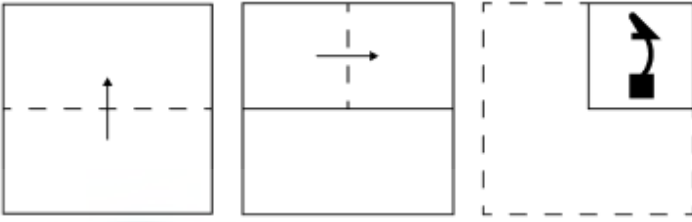
TEJ UDK VCL WBM ?

- Ans**
- 1. XAN
 - 2. YAO
 - 3. YAN
 - 4. XAO

Q.7 In a certain code language, ACEG is coded as 16 and BOQT is coded as 54. How will UWIF be coded in the given language?

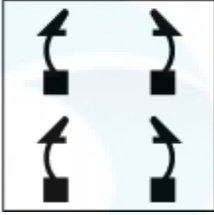
- Ans**
- 1. 60
 - 2. 75
 - 3. 59
 - 4. 57

Q.8 A paper is folded and punched as shown below. How will it appear when unfolded?

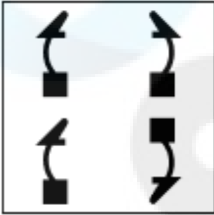


Ans

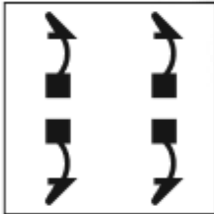
X 1.



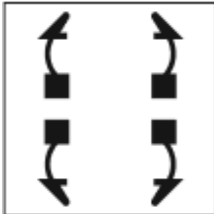
X 2.



X 3.



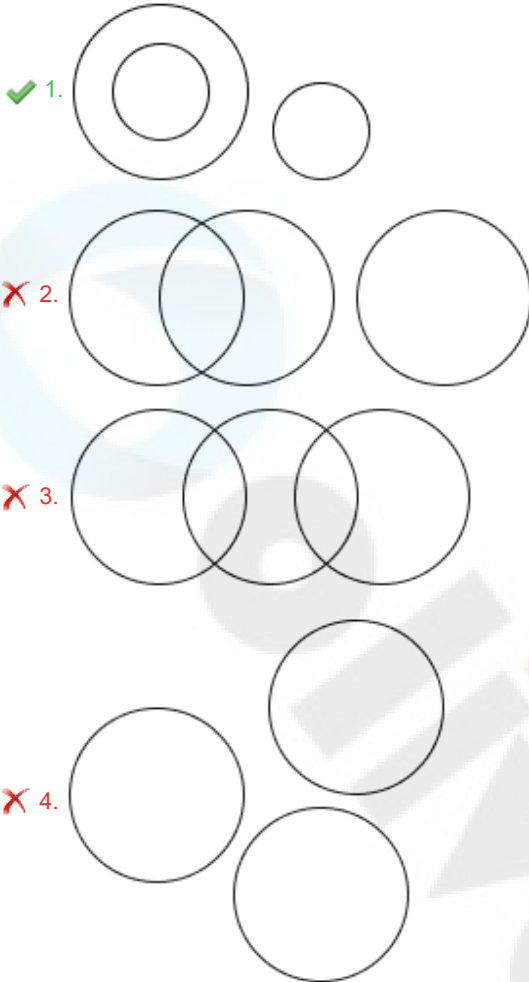
✓ 4.



Q.9 Select the Venn diagram that best illustrates the relationship between the following classes.

Amphibian, Crow, Frog

Ans



Q.10 What should come in place of the question mark (?) in the given series?
77 86 104 140 212 ?

- Ans
- ✗ 1. 355
 - ✓ 2. 356
 - ✗ 3. 358
 - ✗ 4. 357

Q.11 In a certain code language, 'STAIR' is coded as '#*&@\$' and 'TEARS' is coded as '*&^@#'. What is the code for 'I' in the given code language?

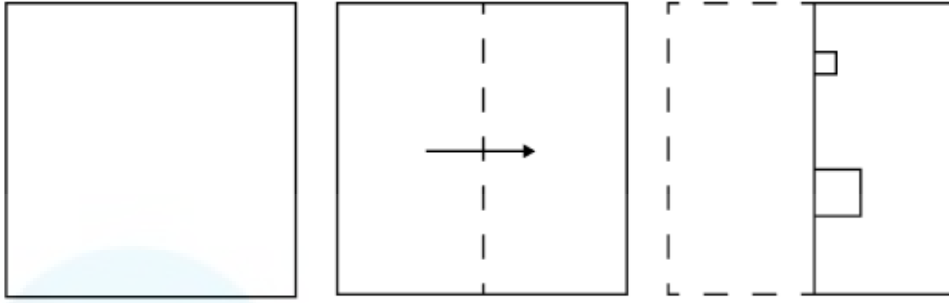
- Ans
- ✗ 1. #
 - ✗ 2. ^
 - ✗ 3. @
 - ✓ 4. \$

Q.12 What should come in place of the question mark (?) in the given series?

9 25 53 157 317 ?

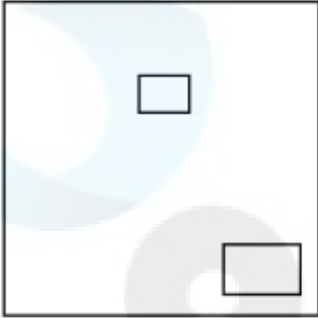
- Ans
- ✗ 1. 953
 - ✗ 2. 947
 - ✓ 3. 949
 - ✗ 4. 951

Q.13 A paper is folded and cut as shown below. How will it appear when unfolded?

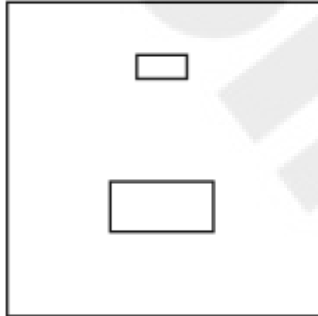


Ans

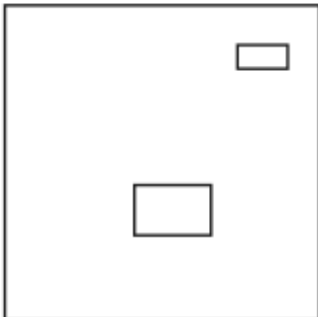
✗ 1.




✓ 2.



✗ 3.



✗ 4.



Q.14 Based on the English alphabetical order, three of the following four letter-clusters are alike in a certain way and thus form a group. Which letter-cluster DOES NOT belong to that group?
(Note: The odd one out is not based on the number of consonants/vowels or their position in the letter-cluster.)

- Ans
- ✗ 1. KOI
 - ✓ 2. MTW
 - ✗ 3. LPJ
 - ✗ 4. OSM

Q.15 The position(s) of how many letters will remain unchanged if each of the letters in the word GRISTLE is arranged in the English alphabetical order?

- Ans
- 1. Two
 - 2. One
 - 3. Three
 - 4. Zero

Q.16 If 2 is added to each odd digit and 2 is subtracted from each even digit in the number 5163748, what will be the sum of the highest and lowest digit in the new number thus formed?

- Ans
- 1. 9
 - 2. 14
 - 3. 11
 - 4. 16

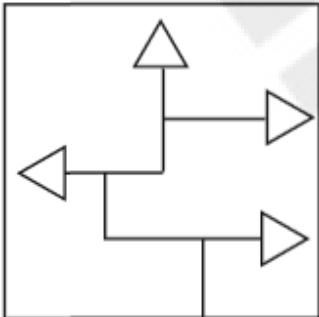
Q.17 Select the option in which the given figure (X) is embedded (rotation is NOT allowed).



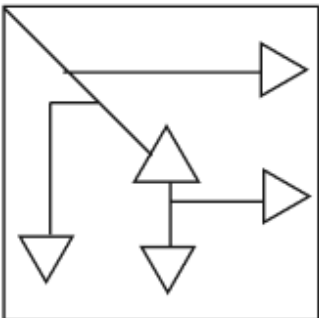
(X)

Ans

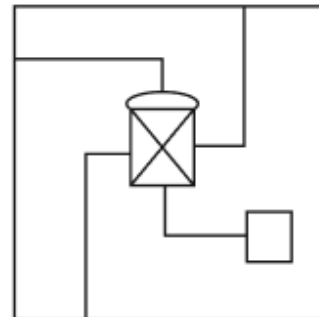
1.



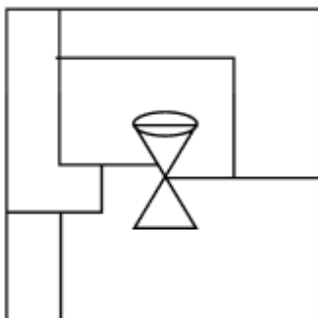
2.



3.



4.



Q.18 Read the given statements and conclusions carefully. Assuming that the information given in the statements is true, even if it appears to be at variance with commonly known facts, decide which of the given conclusion(s) logically follow(s) from the statements.

Statements:

All crows are rocks.

All rocks are plants.

All plants are flowers.

Conclusions:

(I) All crows are flowers.

(II) Some flowers are rocks.

- Ans**
- 1. Only conclusion (II) follows.
 - 2. Neither conclusion (I) nor (II) follows.
 - 3. Only conclusion (I) follows.
 - 4. Both conclusions (I) and (II) follow.

Q.19 In a certain code language,

'A + B' means 'A is the mother of B',

'A - B' means 'A is the brother of B',

'A × B' means 'A is the wife of B' and

'A ÷ B' means 'A is the father of B'.

Based on the above, how is F related to J if 'F + G × H ÷ I - J'?

- Ans**
- 1. Wife's father
 - 2. Mother's mother
 - 3. Daughter
 - 4. Mother's husband

Q.20 E, F, G, H, K, L and N are sitting around a circular table, facing the centre (but not necessarily in the same order). G sits third to the left of K. N sits second to the left of H. Only K sits between L and N. F is not an immediate neighbour of G. How many people sit between E and N when counted from the right of E?

- Ans**
- 1. Three
 - 2. One
 - 3. Two
 - 4. Four

Section : Part-B-General Knowledge and General awareness

Q.1 Who is the Cabinet Secretary of India as of September 2024?

- Ans**
- 1. Rajiv Gauba
 - 2. Ajit Kumar Seth
 - 3. TV Somanathan
 - 4. Pradeep Kumar Sinha

Q.2 A very heavy concentration of Malwa settlements of Chalcolithic period was found in the:

- Ans**
- 1. Ganga basin
 - 2. central Narmada basin
 - 3. Mahanadi basin
 - 4. Indus basin

Q.3 In tennis, the court should be _____ wide for a doubles match as per the International Tennis Federation.

- Ans**
- 1. 35 ft
 - 2. 37 ft
 - 3. 36 ft
 - 4. 38 ft

Q.4 How many types of plate tectonic boundaries are there?

- Ans**
- 1. Four
 - 2. Two
 - 3. Five
 - 4. Three

Q.5 Who advocated that India would be truly independent only when the poorest of its people became free of human suffering?

- Ans**
- 1. Subhash Chandra Bose
 - 2. Jawaharlal Nehru
 - 3. Indira Gandhi
 - 4. Mahatma Gandhi

Q.6 The Khilafat Movement was associated with which of the following communities?

- Ans**
- 1. Sikh
 - 2. Hindu
 - 3. Muslim
 - 4. Christian

Q.7 In a forest ecosystem of Grass → Impala → Hyena, if all the Hyenas are taken away, what will happen ultimately?

- Ans**
- 1. Grass land will not be affected.
 - 2. Impala population will remain stable.
 - 3. Impala will die of starvation due to higher population.
 - 4. Impala will live happily forever.

Q.8 As per NFHS 5, what percentage of the Indian population was deprived of drinking water during the year 2019-21?

- Ans**
- 1. 5.27%
 - 2. 2.06%
 - 3. 7.32%
 - 4. 3.27%

Q.9 Which outcome is typically expected from a government's expansionary fiscal policy?

- Ans**
- 1. Higher interest rates
 - 2. Reduced public spending and investment
 - 3. Increased government savings
 - 4. Stimulation of economic growth

Q.10 Gombe Habba, celebrated in the state of Karnataka during Navaratri, is a festival of:

- Ans**
- 1. mountains
 - 2. kites
 - 3. rivers
 - 4. dolls

Q.11 Right to constitutional remedies as a Fundamental Right of the Constitution of India is stated in which of the following Articles?

- Ans**
- 1. Article 34
 - 2. Article 31
 - 3. Article 32
 - 4. Article 33

Q.12 No money bill can be introduced in the State Legislative Assembly without the prior permission of the _____.

- Ans**
- 1. Chief Minister
 - 2. Deputy Chief Minister
 - 3. Speaker
 - 4. Governor

Q.13 How many points are awarded for Lona in Kabaddi?

- Ans**
- 1. Two
 - 2. Three
 - 3. Five
 - 4. Four

Q.14 Who was the first to introduce Brazilian bossa nova rhythm in Hindi film music?

- Ans**
- 1. Anu Malik
 - 2. RD Burman
 - 3. AR Rahman
 - 4. OP Nayyar

Q.15 What change was observed in agricultural practices after the Green Revolution?

- Ans**
- 1. Focus on monoculture of wheat only
 - 2. Shift from cash crops to subsistence farming
 - 3. Shift from low-yield to high-yield crops
 - 4. Decrease in the use of fertilisers

Q.16 What does the Greek letter ν (nu) represent in physics?

- Ans**
- 1. Velocity of particles
 - 2. Coefficient of friction
 - 3. Density of a substance
 - 4. Frequency of a wave

Q.17 As of October 2024, who is the Comptroller and Auditor General (CAG) of India?

- Ans**
- 1. Manohar Lal
 - 2. Girish Chandra Murmu
 - 3. Nirmala Sitharaman
 - 4. Shivraj Singh Chouhan

Q.18 Which of the following statements is/are INCORRECT?
i. The 'SGSY' scheme was implemented in 2009.
ii. The primary objective of the 'SGSY' scheme was to promote and attain self-employment.
iii. The 'SGSY' scheme performed well in Andhra Pradesh.

- Ans**
- 1. Only i
 - 2. Only ii and iii
 - 3. Only iii
 - 4. Only ii

Q.19 Which of the following classical dance forms from southern India derives its textual sanction from 'Balarama Bharatam' and 'Hastalakshana Deepika'?

- Ans
- 1. Sattriya
 - 2. Kuchipudi
 - 3. Kathakali
 - 4. Mohiniattam

Q.20 Padma Shri awardee of 2024, Mahabir Singh Guddu is a folk dancer from which Indian state?

- Ans
- 1. Rajasthan
 - 2. Gujarat
 - 3. Haryana
 - 4. Uttar Pradesh

Section : Part-C-Elementary Mathematics

Q.1 Raj has ₹1612 with him. He divided it amongst his sons Varun and Ashish and asked them to invest it at 8% rate of interest compounded annually. It was seen that Varun and Ashish got same amount after 18 and 19 years respectively. How much (in ₹) did Raj give to Varun?

- Ans
- 1. 875
 - 2. 775
 - 3. 837
 - 4. 687

Q.2 The fourth proportional to 5, 35 and x is 84, find the value of x.

- Ans
- 1. 294
 - 2. 12
 - 3. 588
 - 4. 14

Q.3 The marks in Mathematics and English of S are in proportion. Last year when he got 60 marks in Mathematics, he secured 75 marks in English. If his marks in English this year are 60, then his Mathematics marks are _____.

- Ans
- 1. 48
 - 2. 40
 - 3. 60
 - 4. 75

Q.4 A and B can do a piece of work in 25 days and 30 days, respectively. They worked together for 6 days, after while B was replaced by P and the work was finished in the next 8 days. How long will P alone take to complete the same work?

- Ans
- 1. $25\frac{3}{4}$ days
 - 2. $15\frac{1}{2}$ days
 - 3. $33\frac{1}{3}$ days
 - 4. $30\frac{2}{5}$ days

Q.5 P can complete a round of circular track in 1 minute and 30 seconds while Q can complete a round in 45 seconds. If they start moving from the same point and move in opposite directions, then they meet after _____ seconds.

- Ans**
- 1. 35
 - 2. 40
 - 3. 30
 - 4. 25

Q.6 Evaluate: $(-9) - (-60) \div (-12) + (-3) \times 7$

- Ans**
- 1. -37
 - 2. -38
 - 3. -35
 - 4. -34

Q.7 What is the highest number between 4000 and 5000, which when divided by 12, 16 and 24 would leave the remainder 4?

- Ans**
- 1. 4699
 - 2. 6499
 - 3. 4969
 - 4. 4996

Q.8 There are 81 members in group A, 29 members in group B and 70 members in group C. All the members of these groups went to a restaurant. The average amount spent on each member of group A, B and C is ₹467, ₹117 and ₹378, respectively. The total average amount (in ₹) spent per member is:

- Ans**
- 1. 375
 - 2. 380
 - 3. 376
 - 4. 377

Q.9 If the curved surface area of a right circular cylinder of height 12 cm is $96 \pi \text{ cm}^2$, then its radius is:

- Ans**
- 1. 8 cm
 - 2. 4 cm
 - 3. 3 cm
 - 4. 6 cm

Q.10 The LCM of 36, 45, 465 and 310 is:

- Ans**
- 1. 5580
 - 2. 5497
 - 3. 5560
 - 4. 5658

Q.11 If 4% of $x = 24$, then x is equal to:

- Ans**
- 1. 700
 - 2. 600
 - 3. 1200
 - 4. 1300

Q.12 Govind invested some money in HDFC at 3% per annum rate of interest. What would be the corresponding simple interest (in ₹) if after 2 years, Govind got ₹203 as compound interest, considering annual compounding?

- Ans
- 1. 200
 - 2. 195
 - 3. 215
 - 4. 210

Q.13 Six persons went to a hotel to have their meals. Five of them spent ₹30 each on their meals. The sixth person spent ₹50 more than the average expenditure of all the six. What was the total money spent by all the persons?

- Ans
- 1. ₹270
 - 2. ₹240
 - 3. ₹300
 - 4. ₹264

Q.14 A dishonest shopkeeper promises to sell his goods at cost price. However, he uses a weight that actually weighs 24% less than what is written on it. Find his profit percentage.

- Ans
- 1. $32\frac{12}{19}\%$
 - 2. $31\frac{11}{19}\%$
 - 3. $30\frac{11}{19}\%$
 - 4. $33\frac{22}{19}\%$

Q.15 The price (per litre) of petrol increases by 50%. By what percent should its consumption be reduced such that the expenditure on it increases by 23% only?

- Ans
- 1. 18%
 - 2. 81%
 - 3. 21%
 - 4. 82%

Q.16 The smallest natural number which is divisible by 33, 72, 11 and 18 is:

- Ans
- 1. 839
 - 2. 696
 - 3. 792
 - 4. 881

Q.17 By selling an article for ₹1,500, a man gains ₹150. At what price (in ₹) should he sell the article to gain 24%?

- Ans
- 1. 1,560
 - 2. 1,870
 - 3. 1,493
 - 4. 1,674

Q.18 Manoj travels from City A to City B. If Manoj drives his car at $\frac{3}{5}$ of his normal speed, then he reaches City B 10 minutes late.
Find the time (in minutes) that Manoj would have taken to travel from City A to City B if he drove at his normal speed.

- Ans**
- 1. 17
 - 2. 11
 - 3. 24
 - 4. 15

Q.19 A shopkeeper offers a festive offer: buy any three shirts, get two free. Find the equivalent percentage discount for the offer.

- Ans**
- 1. 20%
 - 2. 60%
 - 3. 30%
 - 4. 40%

Q.20 Vijay invests a sum of ₹5400 and Mohan invests a sum of ₹9400 at the same rate of simple interest per annum. If, at the end of 4 years, Mohan gets ₹360 more interest than Vijay, then find the rate of interest per annum (in percentage).

- Ans**
- 1. 1.5
 - 2. 2.25
 - 3. 3.25
 - 4. 4.25

Section : Part-D-English

Q.1 Select the most appropriate ANTONYM of the word in the brackets to fill in the blank.

Shoab's _____ (determination) for the cause of the eradication of child labour is praiseworthy.

- Ans**
- 1. Cowardice
 - 2. Victory
 - 3. Contentment
 - 4. Sacrifice

Q.2 Select the word that best completes the given sentence. Determine the collocation through the sentence.

Siva, the singer, _____ live for the first time in five years.

- Ans**
- 1. risen
 - 2. performed
 - 3. lighted
 - 4. shown

Q.3 Select the INCORRECTLY spelt word.

- Ans**
- 1. Evidance
 - 2. Corroborated
 - 3. Hypothesis
 - 4. Scientists

Q.4 Select the most appropriate ANTONYM of the word in brackets to fill in the blank.

The chef prepared a _____ (spicy) curry with bland flavours for those who preferred less heat.

- Ans**
- 1. fiery
 - 2. zesty
 - 3. pungent
 - 4. mild

Q.5 Select the most appropriate ANTONYM of the given word.

Copious

- Ans**
- 1. Practical
 - 2. Excellent
 - 3. Meager
 - 4. Splendid

Q.6 Select the INCORRECTLY spelt word.

He made an appoitment with the dentist for next week.

- Ans**
- 1. next
 - 2. made
 - 3. dentist
 - 4. appoitment

Q.7 Select the most appropriate synonym of the given word.

Placate

- Ans**
- 1. Infuriate
 - 2. Appease
 - 3. Bother
 - 4. Serve

Q.8 Select the most appropriate option that can substitute the underlined segment in the given sentence and rectify it. If no correction is needed, select 'No correction required'.

The article publishes in the newspaper today.

- Ans**
- 1. had published
 - 2. was been published
 - 3. No correction required
 - 4. has been published

Q.9 Select the most appropriate option to fill in the blank.

The diplomat's _____ manner helped in diffusing the tension between the two conflicting parties.

- Ans**
- 1. confrontational
 - 2. abrasive
 - 3. conciliatory
 - 4. indifferent

Q.10 Select the most appropriate option to fill in the blank and complete the given idiom.

Everybody said that Mr. Sen was a man of _____.

- Ans
- 1. books
 - 2. copies
 - 3. letters
 - 4. messages

Q.11 Select the most appropriate ANTONYM of the given word.

Malice

- Ans
- 1. Animosity
 - 2. Sympathy
 - 3. Resentment
 - 4. Antipathy

Q.12 The following sentence has been split into four segments. Identify the segment that contains an error.

A) The supervisor advised / B) him to focus on the / C) examination first and / D) submit the assignment latter.

- Ans
- 1. A
 - 2. B
 - 3. C
 - 4. D

Q.13 The given sentence is divided into four segments. Select the option that has the segment with an adverbial usage error.

Christopher told Mathew, / "Politely, she / takes the bus / to work."

- Ans
- 1. "Politely, she
 - 2. takes the bus
 - 3. Christopher told Mathew,
 - 4. to work."

Q.14 Select the most appropriate option to fill in the blank.

Your tongue gives you information about the taste of food, but your sense of smell also plays an important role when you breathe air out _____ eating.

- Ans
- 1. in
 - 2. while
 - 3. from
 - 4. with

Q.15 Select the most appropriate option to fill in the blank.

Growing up in Mumbai, Nehal's childhood was _____ with memories of playing in gardens and nurturing plants.

- Ans
- 1. full
 - 2. filling
 - 3. fills
 - 4. filled

Comprehension:

In the following passage, some words have been deleted. Read the passage carefully and select the most appropriate option to fill in each blank

The 18th century witnessed a fierce struggle for supremacy in India, pitting the Marathas, a powerful indigenous force, against the formidable British East India Company. The Marathas (1)_____ vast territories and played a pivotal role in shaping the subcontinent's political landscape, receiving tributes from regions beyond their direct rule. The Second Anglo-Maratha War had shattered the power of the Maratha chiefs but not their spirit. The (2)_____ of their freedom rankled in their hearts. They made a last desperate attempt to regain their independence and old prestige in 1817. The lead in organising a united front of the Maratha chiefs was taken by the Peshwa who was smarting under the (3)_____ control exercised by the British Resident. However, Elphinstone, the British Resident at Pune, compelled the Peshwa to sign the treaty of Poona in June 1817. The Peshwa (4)_____ his claim as the 'Peshwa'. Lord Hastings also compelled Daulatrao Sindhia to conclude the Treaty of Gwalior in November 1817. Hardly had Scindia signed the treaty of Gwalior when the Peshwa Bajirao II attacked the British at Kirki, near Pune. The British forces (5)_____ and occupied Pune. The might of the British forces since then had established completely and on many occasions they had proved it easily during their regime.

SubQuestion No : 16

Q.16 Select the most appropriate option to fill in blank no 1.

- Ans**
- 1. survived
 - 2. gifted
 - 3. lost
 - 4. controlled

Comprehension:

In the following passage, some words have been deleted. Read the passage carefully and select the most appropriate option to fill in each blank

The 18th century witnessed a fierce struggle for supremacy in India, pitting the Marathas, a powerful indigenous force, against the formidable British East India Company. The Marathas (1)_____ vast territories and played a pivotal role in shaping the subcontinent's political landscape, receiving tributes from regions beyond their direct rule. The Second Anglo-Maratha War had shattered the power of the Maratha chiefs but not their spirit. The (2)_____ of their freedom rankled in their hearts. They made a last desperate attempt to regain their independence and old prestige in 1817. The lead in organising a united front of the Maratha chiefs was taken by the Peshwa who was smarting under the (3)_____ control exercised by the British Resident. However, Elphinstone, the British Resident at Pune, compelled the Peshwa to sign the treaty of Poona in June 1817. The Peshwa (4)_____ his claim as the 'Peshwa'. Lord Hastings also compelled Daulatrao Sindhia to conclude the Treaty of Gwalior in November 1817. Hardly had Scindia signed the treaty of Gwalior when the Peshwa Bajirao II attacked the British at Kirki, near Pune. The British forces (5)_____ and occupied Pune. The might of the British forces since then had established completely and on many occasions they had proved it easily during their regime.

SubQuestion No : 17

Q.17 Select the most appropriate option to fill in blank no 2.

- Ans**
- 1. disappearance
 - 2. empowerment
 - 3. benefit
 - 4. lost

Comprehension:

In the following passage, some words have been deleted. Read the passage carefully and select the most appropriate option to fill in each blank

The 18th century witnessed a fierce struggle for supremacy in India, pitting the Marathas, a powerful indigenous force, against the formidable British East India Company. The Marathas (1)_____ vast territories and played a pivotal role in shaping the subcontinent's political landscape, receiving tributes from regions beyond their direct rule. The Second Anglo-Maratha War had shattered the power of the Maratha chiefs but not their spirit. The (2)_____ of their freedom rankled in their hearts. They made a last desperate attempt to regain their independence and old prestige in 1817. The lead in organising a united front of the Maratha chiefs was taken by the Peshwa who was smarting under the (3)_____ control exercised by the British Resident. However, Elphinstone, the British Resident at Pune, compelled the Peshwa to sign the treaty of Poona in June 1817. The Peshwa (4)_____ his claim as the 'Peshwa'. Lord Hastings also compelled Daulatrao Sindhia to conclude the Treaty of Gwalior in November 1817. Hardly had Scindia signed the treaty of Gwalior when the Peshwa Bajirao II attacked the British at Kirki, near Pune. The British forces (5)_____ and occupied Pune. The might of the British forces since then had established completely and on many occasions they had proved it easily during their regime.

SubQuestion No : 18

Q.18 Select the most appropriate option to fill in blank no 3.

- Ans**
- 1. satisfying
 - 2. orthodox
 - 3. pleasant
 - 4. rigid

Comprehension:

In the following passage, some words have been deleted. Read the passage carefully and select the most appropriate option to fill in each blank

The 18th century witnessed a fierce struggle for supremacy in India, pitting the Marathas, a powerful indigenous force, against the formidable British East India Company. The Marathas (1)_____ vast territories and played a pivotal role in shaping the subcontinent's political landscape, receiving tributes from regions beyond their direct rule. The Second Anglo-Maratha War had shattered the power of the Maratha chiefs but not their spirit. The (2)_____ of their freedom rankled in their hearts. They made a last desperate attempt to regain their independence and old prestige in 1817. The lead in organising a united front of the Maratha chiefs was taken by the Peshwa who was smarting under the (3)_____ control exercised by the British Resident. However, Elphinstone, the British Resident at Pune, compelled the Peshwa to sign the treaty of Poona in June 1817. The Peshwa (4)_____ his claim as the 'Peshwa'. Lord Hastings also compelled Daulatrao Sindhia to conclude the Treaty of Gwalior in November 1817. Hardly had Scindia signed the treaty of Gwalior when the Peshwa Bajirao II attacked the British at Kirki, near Pune. The British forces (5)_____ and occupied Pune. The might of the British forces since then had established completely and on many occasions they had proved it easily during their regime.

SubQuestion No : 19

Q.19 Select the most appropriate option to fill in blank no 4.

- Ans**
- 1. remembered
 - 2. renounced
 - 3. resigned
 - 4. retreated

Comprehension:

In the following passage, some words have been deleted. Read the passage carefully and select the most appropriate option to fill in each blank

The 18th century witnessed a fierce struggle for supremacy in India, pitting the Marathas, a powerful indigenous force, against the formidable British East India Company. The Marathas (1)_____ vast territories and played a pivotal role in shaping the subcontinent's political landscape, receiving tributes from regions beyond their direct rule. The Second Anglo-Maratha War had shattered the power of the Maratha chiefs but not their spirit. The (2)_____ of their freedom rankled in their hearts. They made a last desperate attempt to regain their independence and old prestige in 1817. The lead in organising a united front of the Maratha chiefs was taken by the Peshwa who was smarting under the (3)_____ control exercised by the British Resident. However, Elphinstone, the British Resident at Pune, compelled the Peshwa to sign the treaty of Poona in June 1817. The Peshwa (4)_____ his claim as the 'Peshwa'. Lord Hastings also compelled Daulatrao Sindhia to conclude the Treaty of Gwalior in November 1817. Hardly had Scindia signed the treaty of Gwalior when the Peshwa Bajirao II attacked the British at Kirki, near Pune. The British forces (5)_____ and occupied Pune. The might of the British forces since then had established completely and on many occasions they had proved it easily during their regime.

SubQuestion No : 20

Q.20 Select the most appropriate option to fill in blank no 5.

- Ans**
- 1. retreated
 - 2. retaliated
 - 3. revenge
 - 4. restricted

Section : Part-D-Hindi

Q.1 निम्नलिखित में से देशज शब्द की पहचान कीजिए।

- Ans**
- 1. मुँह
 - 2. कॉलेज
 - 3. झोला
 - 4. गरीब

Q.2 निम्नलिखित में से किस वाक्य में वर्तनी सम्बन्धी अशुद्धि नहीं है? चयन करें-

- Ans**
- 1. ब्रम्हा का मंदिर किस राज्य में स्थित है।
 - 2. वे जीवनपर्यंत ब्रम्हचारी रहे।
 - 3. भेड़िया मेरे सन्मुख खड़ा था।
 - 4. यह जगद्गुरू शंकराचार्य का कथन है।

Q.3 दिए गए वाक्य में शब्द या वाक्य खण्ड को बदलिए।

आपका पत्र सधन्यवाद मिला।

- Ans
- 1. आपका पत्र धन्यवाद-सहित मिला।
 - 2. आपका पत्र मिला। धन्यवाद।
 - 3. आपका पत्र धन्यवाद के साथ मिला।
 - 4. आपका पत्र धन्यवाद लिपे हुए मिला।

Q.4 'मुद्रिका' का पर्याय निम्न में से हैं --

- Ans
- 1. बंदरगाह
 - 2. अँगूठी
 - 3. रुपया
 - 4. मिट्टी

Q.5 संपत्ति विवाद के कारण दोनों भाइयों के मध्य संबंध विचेद हो गया।'

वाक्य में रेखांकित शब्द की शुद्ध वर्तनी है -

- Ans
- 1. विच्छेद
 - 2. बिच्चछेद
 - 3. विच्चछेद
 - 4. विच्चछेद

Q.6 मुहावरे और उसके अर्थ के लिए सही विकल्प चुनें।
अगर-मगर करना

- Ans
- 1. अच्छा करना
 - 2. टाल-मटोल करना
 - 3. बहाना कर देना
 - 4. अच्छा नहीं करना

Q.7 नीचे दिया गया कौन सा विकल्प रंग, अक्षर और जाति जैसे शब्दों का उपयुक्त अनेकार्थी शब्द है?

- Ans
- 1. विसर्ग
 - 2. विचार
 - 3. वर्ण
 - 4. संकल्प

Q.8 निम्नलिखित वाक्यों में से किस वाक्य में क्रिया विशेषण का प्रयोग नहीं हुआ है?

- Ans
- 1. यह पत्थर तेजी से डूबता है।
 - 2. वह धीरे धीरे चलता है।
 - 3. चावल मत खाओ।
 - 4. चावल जल्दी उबलता है।

Q.9 'जिस बालक के माता - पिता न हों' वाक्यांश के लिए उपयुक्त शब्द होगा-

- Ans
- 1. अनाथ
 - 2. अबोध
 - 3. नवजात
 - 4. अजर

Q.10 निम्न में से किस वाक्य में कारक चिह्न का अशुद्ध प्रयोग हुआ है?

- Ans
- 1. इस नौकरी से पहले वह तीन नौकरियाँ छोड़ चुका है।
 - 2. गार्ड से हरी झंडी दिखाई और गाड़ी चल पड़ी।
 - 3. जिस समय आपने आवाज़ दी, मैं तैयार हो चुका था।
 - 4. उसने जाने से पहले भोजन किया था।

Q.11 दिए गए वाक्य में शब्द या वाक्य खण्ड को बदलिए।

शब्द केवल संकेत मात्र है।

- Ans
- 1. शब्द केवल संकेत है।
 - 2. शब्द संकेत मात्र ही है।
 - 3. शब्द ही संकेत मात्र है।
 - 4. शब्द सिर्फ संकेत मात्र है।

Q.12 _____ और पुरुष जीवन की गाड़ी के दो पहिये हैं।
रिक्त स्थान की पूर्ति के लिए उचित सार्थक शब्द है -

- Ans
- 1. स्त्री
 - 2. गाय
 - 3. शेरनी
 - 4. बकरी

Q.13 निम्नलिखित विकल्पों में से 'नकद' शब्द के लिए किस एक वाक्य में उचित विलोम का प्रयोग हुआ है?

- Ans
- 1. रीता कितना खाती है?
 - 2. उधार माँगने से प्रतिष्ठा गिरती है।
 - 3. उसका भवन सोने का है।
 - 4. नव्या की पोशाक खूबसूरत है।

Q.14 'अपकर्ष' का विलोम शब्द नीचे दिए विकल्पों में से चुनिए-

- Ans
- 1. उत्कर्ष
 - 2. अनुरूप
 - 3. विमर्श
 - 4. सत्कर्ष

Q.15 वह बाण ' जिससे आग की ज्वाला प्रकट ' हो के लिए सार्थक शब्द होना चाहिए।

- Ans
- 1. अग्निशमन
 - 2. अग्नि मिसाइल
 - 3. अग्निहोत्री
 - 4. अग्निबाण

Comprehension:

गद्यांश के आधार पर प्रश्न का उत्तर दें।

धरती के तापमान में लगातार वृद्धि हो रही है। तापमान बढ़ने से _____ (21) पिघलेंगे। समुद्र _____ (22) _____ बढ़ने से महासागरों के अथाह जल भंडार के वितरण में _____ (23) _____ होगा। इससे पृथ्वी पर _____ (24) _____ और बढ़ेगा। नतीजतन भूकंपीय _____ (25) _____ की संभावना भी बढ़ जाएगी।

SubQuestion No : 16

Q.16 उचित शब्द चुनकर गद्यांश में रिक्त स्थान (21) की पूर्ति करें-

- Ans
- 1. पहाड़
 - 2. सतह
 - 3. समुद्र
 - 4. ग्लेशियर

Comprehension:

गद्यांश के आधार पर प्रश्न का उत्तर दें।

धरती के तापमान में लगातार वृद्धि हो रही है। तापमान बढ़ने से _____ (21) पिघलेंगे। समुद्र _____ (22) बढ़ने से महासागरों के अथाह जल भंडार के वितरण में _____ (23) होगा। इससे पृथ्वी पर _____ (24) और बढ़ेगा। नतीजतन भूकंपीय _____ (25) की संभावना भी बढ़ जाएगी।

SubQuestion No : 17

Q.17 उचित शब्द चुनकर गद्यांश में रिक्त स्थान (22) की पूर्ति करें-

- Ans
- 1. सम्पदा
 - 2. भूमि
 - 3. तल
 - 4. क्षेत्रफल

Comprehension:

गद्यांश के आधार पर प्रश्न का उत्तर दें।

धरती के तापमान में लगातार वृद्धि हो रही है। तापमान बढ़ने से _____ (21) पिघलेंगे। समुद्र _____ (22) बढ़ने से महासागरों के अथाह जल भंडार के वितरण में _____ (23) होगा। इससे पृथ्वी पर _____ (24) और बढ़ेगा। नतीजतन भूकंपीय _____ (25) की संभावना भी बढ़ जाएगी।

SubQuestion No : 18

Q.18 उचित शब्द चुनकर गद्यांश में रिक्त स्थान (23) की पूर्ति करें-

- Ans
- 1. भेदभाव
 - 2. परिवर्तन
 - 3. अभाव
 - 4. प्रदूषण

Comprehension:

गद्यांश के आधार पर प्रश्न का उत्तर दें।

धरती के तापमान में लगातार वृद्धि हो रही है। तापमान बढ़ने से _____ (21) पिघलेंगे। समुद्र _____ (22) बढ़ने से महासागरों के अथाह जल भंडार के वितरण में _____ (23) होगा। इससे पृथ्वी पर _____ (24) और बढ़ेगा। नतीजतन भूकंपीय _____ (25) की संभावना भी बढ़ जाएगी।

SubQuestion No : 19

Q.19 उचित शब्द चुनकर गद्यांश में रिक्त स्थान (24) की पूर्ति करें-

- Ans
- 1. भूस्खलन
 - 2. तापमान
 - 3. दबाव
 - 4. भेदभाव

Comprehension:

गद्यांश के आधार पर प्रश्न का उत्तर दें।

धरती के तापमान में लगातार वृद्धि हो रही है। तापमान बढ़ने से _____ (21) पिघलेंगे। समुद्र _____ (22) बढ़ने से महासागरों के अथाह जल भंडार के वितरण में _____ (23) होगा। इससे पृथ्वी पर _____ (24) और बढ़ेगा। नतीजतन भूकंपीय _____ (25) की संभावना भी बढ़ जाएगी।

SubQuestion No : 20

Q.20 उचित शब्द चुनकर गद्यांश में रिक्त स्थान (25) की पूर्ति करें-

- Ans
- 1. गतिविधियों
 - 2. समस्याओं
 - 3. परिवर्तनों
 - 4. खलन