

Constable GD in CAPFs and SSF Rifleman GD in AR and Sepoy in NCB Examination 2025

Exam Date	12/02/2025
Exam Time	12:00 PM - 1:00 PM
Subject	Constable GD Examination 2025

Section : Part-A-General Intelligence and Reasoning

**Q.1** Read the given statements and conclusions carefully. Assuming that the information given in the statements is true, even if it appears to be at variance with commonly known facts, decide which of the given conclusions logically follow(s) from the statements.  
Statements:  
Some words are paragraphs.  
All paragraphs are essays.  
No essay is a story.  
Conclusions:  
(I): Some paragraphs are stories.  
(II): All words are essay.

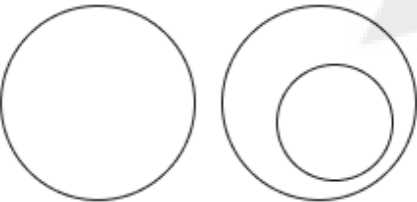
- Ans** ☒ 1. Both conclusions (I) and (II) follow.  
☒ 2. Neither conclusion (I) nor (II) follows.  
☒ 3. Only conclusion (II) follows.  
☒ 4. Only conclusion (I) follows.

**Q.2** Select the Venn diagram that best illustrates the relationship between the following classes.

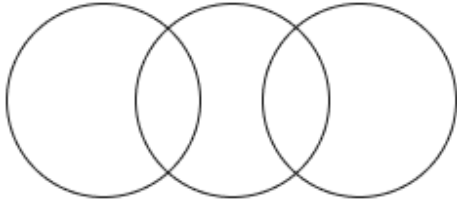
Table, Wood, Steel

**Ans**

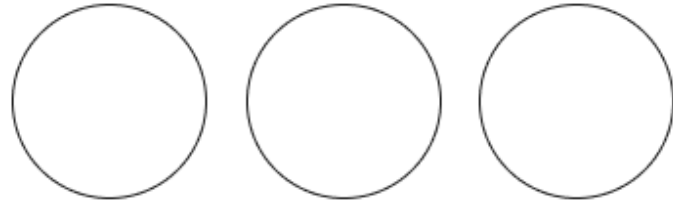
☒ 1.



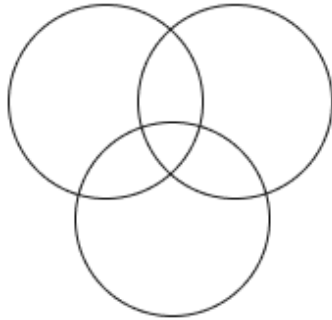
☒ 2.



☒ 3.



☒ 4.



Q.3	In a certain code language, 'AUNT' is coded as '8793' and 'NUTS' is coded as '3598'. What is the code for 'S' in the given code language?
Ans	<div><div><div>✖</div><div>1. 9</div></div><div><div>✖</div><div>2. 8</div></div><div><div>✔</div><div>3. 5</div></div><div><div>✖</div><div>4. 3</div></div></div>
Q.4	RSTR is related to UVWU in a certain way based on the English alphabetical order. In the same way, WXYW is related to ZABZ. To which of the given options is FGHF related, following the same logic?
Ans	<div><div><div>✖</div><div>1. IJJI</div></div><div><div>✖</div><div>2. IJJI</div></div><div><div>✔</div><div>3. IJKI</div></div><div><div>✖</div><div>4. IKJK</div></div></div>
Q.5	What should come in place of the question mark (?) in the given series?  32 39 44 51 56 ?
Ans	<div><div><div>✖</div><div>1. 64</div></div><div><div>✖</div><div>2. 65</div></div><div><div>✖</div><div>3. 62</div></div><div><div>✔</div><div>4. 63</div></div></div>
Q.6	Based on the English alphabetical order, three of the following four letter-clusters are alike in a certain way and thus form a group. Which letter-cluster DOES NOT belong to that group?  (Note: The odd man out is not based on the number of consonants/vowels or their position in the letter-cluster.)
Ans	<div><div><div>✖</div><div>1. GZS</div></div><div><div>✖</div><div>2. OHA</div></div><div><div>✔</div><div>3. FYT</div></div><div><div>✖</div><div>4. IBU</div></div></div>
Q.7	In a certain code language, 'HAMS' is coded as '5607' and 'MASK' is coded as '0578'. What is the code for 'K' in the given code language?
Ans	<div><div><div>✖</div><div>1. 5</div></div><div><div>✖</div><div>2. 0</div></div><div><div>✔</div><div>3. 8</div></div><div><div>✖</div><div>4. 7</div></div></div>
Q.8	G, H, I, J, K, L and M are sitting around a circular table, facing the centre of the table (but not necessarily in the same order). Only two people sit between G and I when counted from the right of G. Only two people sit between I and H. Only three people sit between G and K. M sits to the immediate left of J. How many people sit between L and M when counted from the right of L?
Ans	<div><div><div>✔</div><div>1. Two</div></div><div><div>✖</div><div>2. One</div></div><div><div>✖</div><div>3. Three</div></div><div><div>✖</div><div>4. Four</div></div></div>

**Q.9** What will come in the place of the question mark '(?)' in the following equation, if '−' and '÷' are interchanged and '×' and '+' are interchanged?

$19 + 24 - 6 \times 8 \div 6 = ?$

- Ans**
- ☒ 1. 76
  - ☒ 2. 78
  - ☒ 3. 77
  - ☒ 4. 79

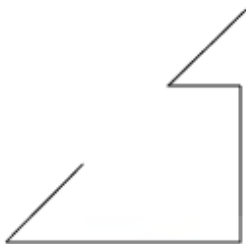
**Q.10** Q is the son of P. P is the father of R. R is the wife of S. T is the son of S. How is Q related to T?

- Ans**
- ☒ 1. Brother
  - ☒ 2. Mother's brother
  - ☒ 3. Father
  - ☒ 4. Mother's father

**Q.11** Seven people, L, M, N, O, W, X and Y, are sitting in a row, facing north (but not necessarily in the same order). No one sits to the left of X. Only four people sit between X and N. Only three people sit to the right of L. M sits to the immediate left of W. O is not an immediate neighbour of L. Who sits at the rightmost end of the line?

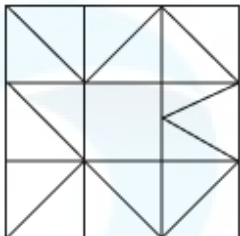
- Ans**
- ☒ 1. L
  - ☒ 2. Y
  - ☒ 3. N
  - ☒ 4. O

Q.12 Select the option in which the given figure is embedded (rotation is NOT allowed).

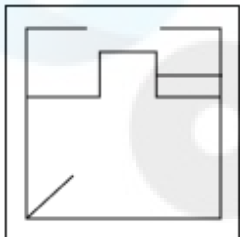


Ans

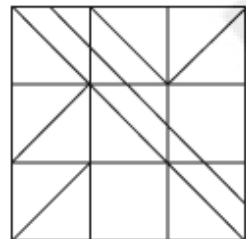
✗ 1.



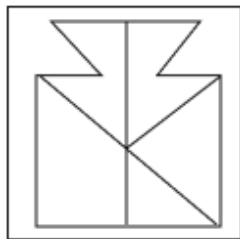
✗ 2.



✓ 3.



✗ 4.



Q.13 What should come in place of the question mark (?) in the given series?

335 280 228 179 133 ?

Ans

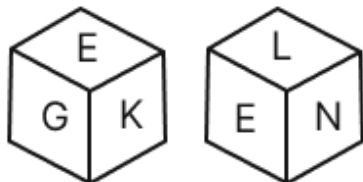
✗ 1. 112

✓ 2. 90

✗ 3. 106

✗ 4. 98

Q.14 A dice has its faces marked by letters N, K, G, H, L and E. Two positions of the same dice are given below. Which face is opposite to face H?



Ans

✓ 1. E

✗ 2. G

✗ 3. L

✗ 4. N

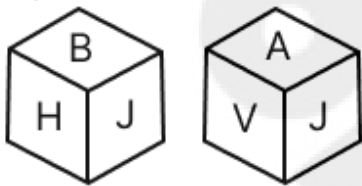
Q.15 The position(s) of how many letters will remain unchanged if each of the letters in the word CABLEWAY is arranged in reverse English alphabetical order?

- Ans
- ☐ 1. Two
  - ☐ 2. Four
  - ☐ 3. Three
  - ☒ 4. One

Q.16 EWRT is related to LDYA in a certain way based on the English alphabetical order. In the same way, GYTV is related to NFAC. To which of the following options is BTOQ related, following the same logic?

- Ans
- ☐ 1. VAIX
  - ☐ 2. IAXV
  - ☐ 3. VAXI
  - ☒ 4. IAVX

Q.17 A dice has its faces marked by letters V, H, A, N, B and J. Two positions of the same dice are given below. Which face is opposite to face N?



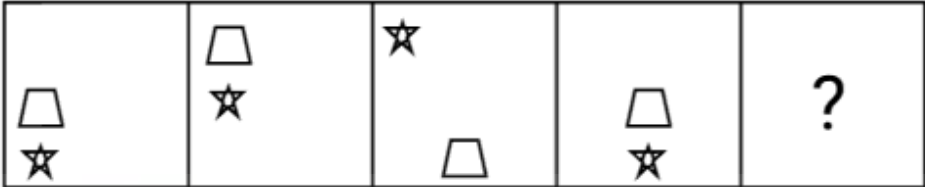
- Ans
- ☐ 1. A
  - ☐ 2. B
  - ☐ 3. H
  - ☒ 4. J

Q.18 What should come in place of the question mark (?) in the given series based on the English alphabetical order?

CZV FYU IXT LWS ?

- Ans
- ☒ 1. OVR
  - ☐ 2. VVO
  - ☐ 3. ORV
  - ☐ 4. VOR

Q.19 Identify the figure given in the options which when put in place of the question mark (?) will logically complete the series.



Ans

- ✗ 1.
- ✗ 2.
- ✗ 3.
- ✓ 4.

Q.20 Select the combination of letters that when filled in the blanks in the same sequence will make the series logically complete.  
\_DHLI\_JNKH\_PMJN\_OLP\_

- ✗ 1. EFMRU
- ✗ 2. EDMSU
- ✗ 3. GDLST
- ✓ 4. GFLRT

Section : Part-B-General Knowledge and General awareness

Q.1 Which Article of the Indian Constitution encourages the protection and improvement of the environment, as well as the safeguarding of forests and wildlife?

- ✗ 1. Article 46D
- ✓ 2. Article 48A
- ✗ 3. Article 47B
- ✗ 4. Article 49A

Q.2 Which chemical found in the peels of citrus fruits is used as a flavouring agent in beverages and chewing gums?

- ✗ 1. Ethylvanillin
- ✗ 2. Menthone
- ✗ 3. Lutidine
- ✓ 4. Limonene

Q.3	Who among the following was the successor of King Bimbisara to the throne of Magadha?
Ans	<div><div><input type="checkbox"/></div><div>1. Udayin</div></div> <div><div><input type="checkbox"/></div><div>2. Ashoka</div></div> <div><div><input type="checkbox"/></div><div>3. Chandragupta Maurya</div></div> <div><div><input checked="" type="checkbox"/></div><div>4. Ajatashatru</div></div>
Q.4	Which of the following neighbouring countries of India has the lowest population density?
Ans	<div><div><input checked="" type="checkbox"/></div><div>1. Bhutan</div></div> <div><div><input type="checkbox"/></div><div>2. Pakistan</div></div> <div><div><input type="checkbox"/></div><div>3. Bangladesh</div></div> <div><div><input type="checkbox"/></div><div>4. Nepal</div></div>
Q.5	Water cycle is the process by which water is circulated in the environment in different forms among:
Ans	<div><div><input type="checkbox"/></div><div>1. rivers and oceans</div></div> <div><div><input type="checkbox"/></div><div>2. clouds and atmosphere</div></div> <div><div><input type="checkbox"/></div><div>3. land and ocean</div></div> <div><div><input checked="" type="checkbox"/></div><div>4. oceans, atmosphere and land</div></div>
Q.6	Who among the following is NOT associated with Kathakali, a classical dance form of India?
Ans	<div><div><input checked="" type="checkbox"/></div><div>1. Kelucharan Mohapatra</div></div> <div><div><input type="checkbox"/></div><div>2. Ramankutty Nair</div></div> <div><div><input type="checkbox"/></div><div>3. Kalamandalam Rajan</div></div> <div><div><input type="checkbox"/></div><div>4. Kalamandalam Gopi</div></div>
Q.7	Which event led to the formation of the Muslim League in 1906?
Ans	<div><div><input type="checkbox"/></div><div>1. Montagu-Chelmsford Reforms</div></div> <div><div><input checked="" type="checkbox"/></div><div>2. Partition of Bengal</div></div> <div><div><input type="checkbox"/></div><div>3. Indian Councils Act</div></div> <div><div><input type="checkbox"/></div><div>4. Simla Deputation</div></div>
Q.8	India celebrated the 146 <sup>th</sup> birth anniversary of which of the following famous social reformers and rationalists from Tamil Nadu on 17 September 2024?
Ans	<div><div><input type="checkbox"/></div><div>1. Radhakrishnan</div></div> <div><div><input checked="" type="checkbox"/></div><div>2. Periyar EV Ramasamy</div></div> <div><div><input type="checkbox"/></div><div>3. Mahatma Gandhi</div></div> <div><div><input type="checkbox"/></div><div>4. MK Stalin</div></div>
Q.9	Which of the following is a part of the Primary Sector of the Indian Economy?
Ans	<div><div><input type="checkbox"/></div><div>1. Broadcasting services</div></div> <div><div><input type="checkbox"/></div><div>2. Construction</div></div> <div><div><input type="checkbox"/></div><div>3. Real estate</div></div> <div><div><input checked="" type="checkbox"/></div><div>4. Animal husbandry</div></div>
Q.10	KD Jadhav has won the Olympics medal in which of the following sports?
Ans	<div><div><input checked="" type="checkbox"/></div><div>1. Wrestling</div></div> <div><div><input type="checkbox"/></div><div>2. Shooting</div></div> <div><div><input type="checkbox"/></div><div>3. Boxing</div></div> <div><div><input type="checkbox"/></div><div>4. Weightlifting</div></div>

Q.11	The Sangeetha Kala Vibhushan award for 2020 was given to which of the following personalities?
Ans	<div><div><input checked="" type="checkbox"/></div>1. Vannadil Pudiyaaveetil Dhananjayan and Shanta Dhananjayan</div> <div><div><input type="checkbox"/></div>2. Uma Sharma and Jatin Goswami</div> <div><div><input type="checkbox"/></div>3. Yamini Krishnamurthy and Saroja Vaidyanathan</div> <div><div><input type="checkbox"/></div>4. Priyadarshini Govind and Rajkumar Bharathi</div>
Q.12	What was the mascot of the FIH Men's Hockey World Cup 2023 held in India?
Ans	<div><div><input type="checkbox"/></div>1. Jhampa</div> <div><div><input type="checkbox"/></div>2. Sikhta</div> <div><div><input type="checkbox"/></div>3. Simphu</div> <div><div><input checked="" type="checkbox"/></div>4. Olly</div>
Q.13	Which is the national fruit of Bangladesh?
Ans	<div><div><input checked="" type="checkbox"/></div>1. Jackfruit</div> <div><div><input type="checkbox"/></div>2. Apple</div> <div><div><input type="checkbox"/></div>3. Pomegranate</div> <div><div><input type="checkbox"/></div>4. Mango</div>
Q.14	Which industry focuses on transforming raw materials into finished products?
Ans	<div><div><input type="checkbox"/></div>1. Service industry</div> <div><div><input type="checkbox"/></div>2. Genetic industry</div> <div><div><input type="checkbox"/></div>3. Primary industry</div> <div><div><input checked="" type="checkbox"/></div>4. Manufacturing industry</div>
Q.15	Dubnium, an artificially produced radioactive transuranium element with atomic number 105, is present in which group of the periodic table?
Ans	<div><div><input type="checkbox"/></div>1. Group 7</div> <div><div><input type="checkbox"/></div>2. Group 3</div> <div><div><input checked="" type="checkbox"/></div>3. Group 5</div> <div><div><input type="checkbox"/></div>4. Group 11</div>
Q.16	Which of the following years marked the end of the initial seven Five Year Plans that commenced in 1950?
Ans	<div><div><input type="checkbox"/></div>1. 1988</div> <div><div><input checked="" type="checkbox"/></div>2. 1990</div> <div><div><input type="checkbox"/></div>3. 1986</div> <div><div><input type="checkbox"/></div>4. 1984</div>
Q.17	Who among the following nominates one-sixth members to the state legislative council of a state in India?
Ans	<div><div><input type="checkbox"/></div>1. President</div> <div><div><input type="checkbox"/></div>2. Chief Minister</div> <div><div><input checked="" type="checkbox"/></div>3. Governor</div> <div><div><input type="checkbox"/></div>4. State Election Commissioner</div>
Q.18	Indian classical vocalist Rashid Khan belonged to which of the following gharanas of music?
Ans	<div><div><input type="checkbox"/></div>1. Lucknow</div> <div><div><input type="checkbox"/></div>2. Atrauli - Jaipur</div> <div><div><input checked="" type="checkbox"/></div>3. Rampur - Sahaswan</div> <div><div><input type="checkbox"/></div>4. Gwalior</div>



**Q.19** In March 2024, Sukhbir Singh Sandhu, a 1988 batch Uttarakhand cadre officer of the Indian Administrative Service, joined which of the following departments of the Indian Government?

- Ans**
- ☐ 1. Reserve Bank of India (RBI)
  - ☐ 2. Comptroller and Auditor General of India (CAG)
  - ☐ 3. Union Public Service Commission (UPSC)
  - ☒ 4. Election Commission of India (ECI)

**Q.20** Which of the following is mainly observed by the Christian community?

- Ans**
- ☐ 1. Mahavir Jayanti
  - ☐ 2. Muharram
  - ☐ 3. Milad-Un-Nabi
  - ☒ 4. Good Friday

Section : Part-C-Elementary Mathematics

**Q.1** The price of fuel decreases by 25%, 15% and 45% in three successive months, but increases by 65% in the fourth month. What is the percentage increase/decrease in the price of fuel in the fourth month as compared to its original price?

- Ans**
- ☐ 1. Increases by 38.95%
  - ☐ 2. Increases by 47.41%
  - ☒ 3. Decreases by 42.14%
  - ☐ 4. Decreases by 37.35%

**Q.2** Raghu invested some money in HDFC at 4% per annum rate of interest. What would be the corresponding simple interest (in ₹) if after 2 years, Raghu got ₹102 as compound interest, considering annual compounding?

- Ans**
- ☐ 1. 115
  - ☐ 2. 110
  - ☒ 3. 100
  - ☐ 4. 95

**Q.3** Find the volume of a sphere whose radius is 10 cm.

(Take  $\pi = 3.141$ )

- Ans**
- ☒ 1. 4188 cm<sup>3</sup>
  - ☐ 2. 4238 cm<sup>3</sup>
  - ☐ 3. 4288 cm<sup>3</sup>
  - ☐ 4. 4138 cm<sup>3</sup>

**Q.4** If 2% of  $x = 264$ , then  $x$  is equal to:

- Ans**
- ☐ 1. 26400
  - ☐ 2. 13300
  - ☒ 3. 13200
  - ☐ 4. 26500

**Q.5** Two trains of lengths 250 metres and 350 metres will cross each other in \_\_\_\_\_ seconds when moving in opposite directions with speeds 35 km per hour and 25 km per hour.

- Ans**
- ☐ 1. 30
  - ☒ 2. 36
  - ☐ 3. 34
  - ☐ 4. 32

Q.6	Suraj completes $\frac{1}{12}$ of a work in nine days. At this rate, how many more days will he take to complete the work?
Ans	<div><div><div>✖</div><div>1. 90</div></div><div><div>✖</div><div>2. 108</div></div><div><div>✖</div><div>3. 81</div></div><div><div>✔</div><div>4. 99</div></div></div>
Q.7	There are 38 members in group A, 31 members in group B and 52 members in group C. All the members of these groups went to a restaurant. The average amount spent on each member of group A, B and C is ₹375, ₹309 and ₹298, respectively. The total average amount (in ₹) spent per member is:
Ans	<div><div><div>✖</div><div>1. 330</div></div><div><div>✖</div><div>2. 329</div></div><div><div>✔</div><div>3. 325</div></div><div><div>✖</div><div>4. 327</div></div></div>
Q.8	Zakir travels from City A to City B. If Zakir drives his car at $\frac{3}{8}$ of his normal speed, then he reaches City B 45 minutes late. Find the time (in minutes) that Zakir would have taken to travel from City A to City B if he drove at his normal speed.
Ans	<div><div><div>✖</div><div>1. 25</div></div><div><div>✖</div><div>2. 18</div></div><div><div>✖</div><div>3. 34</div></div><div><div>✔</div><div>4. 27</div></div></div>
Q.9	The single discount equivalent to three successive discounts of 16%, 10% and 25% is:
Ans	<div><div><div>✖</div><div>1. 38.7%</div></div><div><div>✔</div><div>2. 43.3%</div></div><div><div>✖</div><div>3. 53.6%</div></div><div><div>✖</div><div>4. 49.5%</div></div></div>
Q.10	400 guavas were bought at ₹1230 per hundred and were sold at a profit of ₹880. Find the selling price (in ₹) per dozen of guavas.
Ans	<div><div><div>✖</div><div>1. 164</div></div><div><div>✖</div><div>2. 184</div></div><div><div>✔</div><div>3. 174</div></div><div><div>✖</div><div>4. 189</div></div></div>
Q.11	Vipul invests a sum of ₹5400 and Vijay invests a sum of ₹9400 at the same rate of simple interest per annum. If, at the end of 4 years, Vijay gets ₹840 more interest than Vipul, then find the rate of interest per annum (in percentage).
Ans	<div><div><div>✖</div><div>1. 4.25</div></div><div><div>✖</div><div>2. 3.25</div></div><div><div>✖</div><div>3. 7.25</div></div><div><div>✔</div><div>4. 5.25</div></div></div>
Q.12	The smallest number which when decreased by 3 is divisible by 15, 25 and 55, is:
Ans	<div><div><div>✔</div><div>1. 828</div></div><div><div>✖</div><div>2. 825</div></div><div><div>✖</div><div>3. 831</div></div><div><div>✖</div><div>4. 822</div></div></div>

Q.13 Find the value of  $\left[ (27 \times 5) \times \left\{ 3 \div 3 \times \frac{(15 - 13)}{2} \right\} \right]$

- Ans
- ☒ 1. 138
  - ☒ 2. 135
  - ☒ 3. 143
  - ☒ 4. 149

Q.14 Six pipes are required to fill a tank in 1 hour 45 minutes. How long will it take if only three pipes of the same type are used?

- Ans
- ☒ 1. 3 h 20 min
  - ☒ 2. 3 h 15 min
  - ☒ 3. 3 h 40 min
  - ☒ 4. 3 h 30 min

Q.15 Find the value of  $\left[ (17 \times 9) \times \left\{ 6 \div 3 \times \frac{(18 - 14)}{2} \right\} \right]$

- Ans
- ☒ 1. 637
  - ☒ 2. 612
  - ☒ 3. 613
  - ☒ 4. 631

Q.16 The average of 12 numbers is 49.5. The average of the first 5 numbers is 45, and the average of the next 4 numbers is 53.25. What is the average of the remaining three numbers?

- Ans
- ☒ 1. 84
  - ☒ 2. 52
  - ☒ 3. 62
  - ☒ 4. 26

Q.17 What is the greatest number that will divide 175 and 385 leaving the remainders 4 and 5, respectively?

- Ans
- ☒ 1. 21
  - ☒ 2. 20
  - ☒ 3. 22
  - ☒ 4. 19

Q.18 A team of 20 people can complete a work in 15 days. After working for 6 days, 10 workers leave. How many additional days will it take for the remaining workers to finish the work?

- Ans
- ☒ 1. 18
  - ☒ 2. 17
  - ☒ 3. 15
  - ☒ 4. 16

Q.19 If at same rate of interest, in 2 years, the simple interest is ₹40 and compound interest is ₹60, then what is the principal (in ₹)?

- Ans
- ☒ 1. 13
  - ☒ 2. 24
  - ☒ 3. 15
  - ☒ 4. 20

Q.20 15 mangoes are bought for ₹250, and 9 mangoes are bought for ₹200. If all the mangoes are sold at ₹240 per dozen, then what is the profit percentage in the entire transaction (round up to two decimal places)?

Ans ☒ 1. 106.67%

☒ 2. 6.67%

☒ 3. 93.37%

☒ 4. 66.67%

Section : Part-D-English

Q.1 The following sentence has been split into four segments. Identify the segment that contains a spelling error.

The crescent / moon looked / fantastically gorgeous / and aluring.

Ans ☒ 1. moon looked

☒ 2. and aluring.

☒ 3. fantastically gorgeous

☒ 4. The crescent

Q.2 Select the most appropriate idiom that can substitute the underlined segment in the given sentence.

I appreciate the detailed report, but let's talk about the important points and not waste time; what's the bottom line?

Ans ☒ 1. cut to the chase

☒ 2. hone your skills

☒ 3. think of the unthinkable

☒ 4. bear the stamp

Q.3 In the sentence, 'The company's profits dwindled due to poor management', what is a synonym of the word 'dwindled'?

Ans ☒ 1. Fluctuated

☒ 2. Increased

☒ 3. Decreased

☒ 4. Stabilised

Q.4 Select the INCORRECTLY spelt word.

Ans ☒ 1. Competitor

☒ 2. Psychiatry

☒ 3. Occassional

☒ 4. Ammunition

Q.5 The given sentence is divided into four segments. Select the option that has the segment with an adverbial usage error.

Andrew and Victoria politely / skipped down / the street / near the apartment.

Ans ☒ 1. Andrew and Victoria politely

☒ 2. skipped down

☒ 3. near the apartment

☒ 4. the street

Q.6 In the sentence 'His ideas were radical', what is the most appropriate ANTONYM of the word 'radical'?

Ans ☒ 1. Progressive

☒ 2. Innovative

☒ 3. Conservative

☒ 4. Extreme

Q.7	Select the most appropriate option to fill in the blank.  The team worked hard to _____ the deadline for the project.  Ans <input checked="" type="checkbox"/> 1. ask <input checked="" type="checkbox"/> 2. correct <input checked="" type="checkbox"/> 3. meet <input checked="" type="checkbox"/> 4. twist
Q.8	Select the most appropriate option to substitute the underlined phrase in the given sentence.  Despite the failure, the startup managed to <u>keep their heads above water</u> .  Ans <input checked="" type="checkbox"/> 1. avoid trouble <input checked="" type="checkbox"/> 2. give up <input checked="" type="checkbox"/> 3. succeed completely <input checked="" type="checkbox"/> 4. fail miserably
Q.9	Select the most appropriate option to fill in the blank.  I am going to get an email with more details, _____ I?  Ans <input checked="" type="checkbox"/> 1. won't <input checked="" type="checkbox"/> 2. don't <input checked="" type="checkbox"/> 3. aren't <input checked="" type="checkbox"/> 4. can't
Q.10	Select the most appropriate ANTONYM of the given word. Extrusion  Ans <input checked="" type="checkbox"/> 1. Welcome <input checked="" type="checkbox"/> 2. Exile <input checked="" type="checkbox"/> 3. Suspension <input checked="" type="checkbox"/> 4. Banish
Q.11	The following sentence has been split into four segments. Identify the segment that contains a grammatical error.  (A) They carefully planned the surprise party, / (B) ensuring everything / (C) was perfect for their friend, / (D) who thoughtful celebrated their birthdays.  Ans <input checked="" type="checkbox"/> 1. B <input checked="" type="checkbox"/> 2. D <input checked="" type="checkbox"/> 3. A <input checked="" type="checkbox"/> 4. C
Q.12	Select the most appropriate option that can substitute the underlined segment in the given sentence.  Loss of reflective sea ice <u>has been link in more</u> extreme weather patterns in Eurasia and North America.  Ans <input checked="" type="checkbox"/> 1. has link to more <input checked="" type="checkbox"/> 2. has linked to more <input checked="" type="checkbox"/> 3. has been linked by more <input checked="" type="checkbox"/> 4. has been linked to more

Q.13 Select the most appropriate ANTONYM of the underlined word.

The company decided to withhold the bonuses until the project's completion to ensure everyone stayed motivated until the end.

- Ans
- ☒ 1. Plant
  - ☒ 2. Keep
  - ☒ 3. Grant
  - ☒ 4. Save

Q.14 Select the most appropriate synonym of the given word.

Esteemed

- Ans
- ☒ 1. Prominent
  - ☒ 2. Large
  - ☒ 3. Happy
  - ☒ 4. Peaceful

Q.15 Select the most appropriate option to fill in the blanks.

Her intricate (1)\_\_\_ displayed delicate strokes, bold colours and a captivating (2)\_\_\_, making it one of the most impressive pieces in the (3)\_\_\_\_\_.

- Ans
- ☒ 1. (1) composition ; (2) painting ; (3) gallery
  - ☒ 2. (1) painting ; (2) composition ; (3) gallery
  - ☒ 3. (1) gallery ; (2) composition ; (3) painting
  - ☒ 4. (1) composition ; (2) gallery ; (3) painting

Comprehension:

In the following passage, some words have been deleted. Read the passage carefully and select the most appropriate option to fill in each blank

Childhood is a time when there are few responsibilities to make life difficult. If a child (1)\_\_\_\_\_ good parents and they are fed, looked after and loved, whatever they may do, it is improbable that they will ever again in life (2)\_\_\_\_\_ given so much without having to do anything in return. In addition, life is always presenting new things to the child. A child finds pleasure in playing in the rain or in the snow. Their first visit to the seaside is a marvelous adventure. However, a child has their pains; they are not free to do as they wish; they are continually being told not to do things or are being (3)\_\_\_\_\_. Their life is therefore not perfectly happy. When the young individual starts to earn their own living, they become free from the discipline of school and parents, but at the same time they are forced to accept responsibilities. They can no longer expect others to pay for food, clothes and room, but they have to work if they want to live (4)\_\_\_\_\_. If they spend most of their time playing about in the way that they used to as a child, they will go hungry. Moreover, if they break the laws of society just as they used to break the laws of their parents, they may go to prison. However, by working, keeping out of (5)\_\_\_\_\_ and having good health, they can have the great happiness of seeing themselves make steady progress in their job and of building up for themselves their own position in society.

SubQuestion No : 16

Q.16 Select the most appropriate option to fill in blank no. 1.

- Ans
- ☒ 1. will
  - ☒ 2. has
  - ☒ 3. have
  - ☒ 4. are

**Comprehension:**

In the following passage, some words have been deleted. Read the passage carefully and select the most appropriate option to fill in each blank

Childhood is a time when there are few responsibilities to make life difficult. If a child (1)\_\_\_\_\_ good parents and they are fed, looked after and loved, whatever they may do, it is improbable that they will ever again in life (2)\_\_\_\_\_ given so much without having to do anything in return. In addition, life is always presenting new things to the child. A child finds pleasure in playing in the rain or in the snow. Their first visit to the seaside is a marvelous adventure. However, a child has their pains; they are not free to do as they wish; they are continually being told not to do things or are being (3)\_\_\_\_\_. Their life is therefore not perfectly happy. When the young individual starts to earn their own living, they become free from the discipline of school and parents, but at the same time they are forced to accept responsibilities. They can no longer expect others to pay for food, clothes and room, but they have to work if they want to live (4)\_\_\_\_\_. If they spend most of their time playing about in the way that they used to as a child, they will go hungry. Moreover, if they break the laws of society just as they used to break the laws of their parents, they may go to prison. However, by working, keeping out of (5)\_\_\_\_\_ and having good health, they can have the great happiness of seeing themselves make steady progress in their job and of building up for themselves their own position in society.

**SubQuestion No : 17**

**Q.17** Select the most appropriate option to fill in blank no. 2.

- Ans**
- ☒ 1. are
  - ☒ 2. be
  - ☐ 3. is
  - ☐ 4. has

**Comprehension:**

In the following passage, some words have been deleted. Read the passage carefully and select the most appropriate option to fill in each blank

Childhood is a time when there are few responsibilities to make life difficult. If a child (1)\_\_\_\_\_ good parents and they are fed, looked after and loved, whatever they may do, it is improbable that they will ever again in life (2)\_\_\_\_\_ given so much without having to do anything in return. In addition, life is always presenting new things to the child. A child finds pleasure in playing in the rain or in the snow. Their first visit to the seaside is a marvelous adventure. However, a child has their pains; they are not free to do as they wish; they are continually being told not to do things or are being (3)\_\_\_\_\_. Their life is therefore not perfectly happy. When the young individual starts to earn their own living, they become free from the discipline of school and parents, but at the same time they are forced to accept responsibilities. They can no longer expect others to pay for food, clothes and room, but they have to work if they want to live (4)\_\_\_\_\_. If they spend most of their time playing about in the way that they used to as a child, they will go hungry. Moreover, if they break the laws of society just as they used to break the laws of their parents, they may go to prison. However, by working, keeping out of (5)\_\_\_\_\_ and having good health, they can have the great happiness of seeing themselves make steady progress in their job and of building up for themselves their own position in society.

**SubQuestion No : 18**

**Q.18** Select the most appropriate option to fill in blank no. 3.

- Ans**
- ☐ 1. rewarded
  - ☒ 2. punished
  - ☐ 3. displayed
  - ☐ 4. granted

**Comprehension:**

In the following passage, some words have been deleted. Read the passage carefully and select the most appropriate option to fill in each blank

Childhood is a time when there are few responsibilities to make life difficult. If a child (1)\_\_\_\_\_ good parents and they are fed, looked after and loved, whatever they may do, it is improbable that they will ever again in life (2)\_\_\_\_\_ given so much without having to do anything in return. In addition, life is always presenting new things to the child. A child finds pleasure in playing in the rain or in the snow. Their first visit to the seaside is a marvelous adventure. However, a child has their pains; they are not free to do as they wish; they are continually being told not to do things or are being (3)\_\_\_\_\_. Their life is therefore not perfectly happy. When the young individual starts to earn their own living, they become free from the discipline of school and parents, but at the same time they are forced to accept responsibilities. They can no longer expect others to pay for food, clothes and room, but they have to work if they want to live (4)\_\_\_\_\_. If they spend most of their time playing about in the way that they used to as a child, they will go hungry. Moreover, if they break the laws of society just as they used to break the laws of their parents, they may go to prison. However, by working, keeping out of (5)\_\_\_\_\_ and having good health, they can have the great happiness of seeing themselves make steady progress in their job and of building up for themselves their own position in society.

**SubQuestion No : 19**

**Q.19** Select the most appropriate option to fill in blank no. 4.

- Ans
- ☒ 1. granting
  - ☒ 2. contrasting
  - ☒ 3. comfortably
  - ☒ 4. revolutionary

**Comprehension:**

In the following passage, some words have been deleted. Read the passage carefully and select the most appropriate option to fill in each blank

Childhood is a time when there are few responsibilities to make life difficult. If a child (1)\_\_\_\_\_ good parents and they are fed, looked after and loved, whatever they may do, it is improbable that they will ever again in life (2)\_\_\_\_\_ given so much without having to do anything in return. In addition, life is always presenting new things to the child. A child finds pleasure in playing in the rain or in the snow. Their first visit to the seaside is a marvelous adventure. However, a child has their pains; they are not free to do as they wish; they are continually being told not to do things or are being (3)\_\_\_\_\_. Their life is therefore not perfectly happy. When the young individual starts to earn their own living, they become free from the discipline of school and parents, but at the same time they are forced to accept responsibilities. They can no longer expect others to pay for food, clothes and room, but they have to work if they want to live (4)\_\_\_\_\_. If they spend most of their time playing about in the way that they used to as a child, they will go hungry. Moreover, if they break the laws of society just as they used to break the laws of their parents, they may go to prison. However, by working, keeping out of (5)\_\_\_\_\_ and having good health, they can have the great happiness of seeing themselves make steady progress in their job and of building up for themselves their own position in society.

**SubQuestion No : 20**

**Q.20** Select the most appropriate option to fill in blank no. 5.

- Ans
- ☒ 1. troubles
  - ☒ 2. disturbs
  - ☒ 3. touches
  - ☒ 4. beats

**Section : Part-D-Hindi**

**Q.1** 'तुम्हारा झगड़ा बढ़ता ही जा रहा है इसलिए अब \_\_\_\_\_ बैठ कर ही बात होगी।'

उचित सार्थक और निरर्थक शब्द-युग्म वाले विकल्प का चयन करके उपरोक्त वाक्य पूर्ण करें-

- Ans
- ☒ 1. सामने-सामने
  - ☒ 2. आमने-सामने
  - ☒ 3. ऊपर-ऊपर
  - ☒ 4. पीठ-पीछे

**Q.2** 'ठाकुर अपने कुँएँ पर किसी को पानी नहीं भरने देता था।' इस वाक्य में प्रयुक्त 'ठाकुर' शब्द का अनेकार्थी शब्द निम्न में से कौनसा है?

- Ans
- ☒ 1. राक्षस
  - ☒ 2. ईश्वर
  - ☒ 3. पंडित
  - ☒ 4. गधा



Q.3	निम्नलिखित वाक्यांश के लिए सार्थक शब्द चुनिए- अपनों से बड़ों के लिए प्रयुक्त किया जाने वाला सम्मान सूचक शब्द
Ans	<div><div><div>✖</div><div>1. ऋषि</div></div><div><div>✔</div><div>2. महोदय</div></div><div><div>✖</div><div>3. महासन</div></div><div><div>✖</div><div>4. मुनि</div></div></div>
Q.4	‘जो कानून के विरुद्ध हो’ वाक्यांश के लिए उपयुक्त शब्द होगा-
Ans	<div><div><div>✖</div><div>1. त्याज्य</div></div><div><div>✖</div><div>2. अनैतिक</div></div><div><div>✔</div><div>3. अवैध</div></div><div><div>✖</div><div>4. अपराधी</div></div></div>
Q.5	निम्नलिखित में से किस वाक्य में रेखांकित शब्द पुल्लिंग है ?
Ans	<div><div><div>✖</div><div>1. <u>सतलुज</u> में बहुत पानी है।</div></div><div><div>✔</div><div>2. यह <u>ब्रह्मपुत्र</u> का किनारा है।</div></div><div><div>✖</div><div>3. <u>झेलम</u> कश्मीर में है।</div></div><div><div>✖</div><div>4. <u>महानदी</u> का नाम सूना होगा।</div></div></div>
Q.6	निम्नलिखित वाक्य के किस खंड में अशुद्धि है?  दस रुपया में क्या आता है?
Ans	<div><div><div>✖</div><div>1. क्या</div></div><div><div>✖</div><div>2. दस</div></div><div><div>✖</div><div>3. आता</div></div><div><div>✔</div><div>4. रुपया</div></div></div>
Q.7	निम्न में किस वाक्य में क्रियाविशेषण शब्द का अशुद्ध प्रयोग हुआ है?
Ans	<div><div><div>✖</div><div>1. महँगाई में दिन-रात मेहनत करके ही पेट पाला जा सकता है।</div></div><div><div>✖</div><div>2. घर-घर में यही कहानी है कोई मिलकर रहता ही नहीं।</div></div><div><div>✔</div><div>3. धीरे-धीरे कार्य करने से काम जल्दी पूर्ण हो जाता है।</div></div><div><div>✖</div><div>4. वह उधार चुकाना नहीं चाहता तभी कल-परसों करता रहता है।</div></div></div>
Q.8	‘स्थिर’ का विलोम शब्द नीचे दिए विकल्पों में से चुनिए-
Ans	<div><div><div>✖</div><div>1. अवस्थित</div></div><div><div>✖</div><div>2. स्थित</div></div><div><div>✖</div><div>3. अचंचल</div></div><div><div>✔</div><div>4. चंचल</div></div></div>
Q.9	‘गुलाब के फूल की _____ सभी के मन को भाती है।’ रिक्त स्थान की पूर्ति के लिए उचित सार्थक शब्द है -
Ans	<div><div><div>✔</div><div>1. सुगंध</div></div><div><div>✖</div><div>2. दुर्लभ</div></div><div><div>✖</div><div>3. बदबू</div></div><div><div>✖</div><div>4. दुर्गन्ध</div></div></div>

Q.10	निम्नलिखित वाक्यांश को ध्यानपूर्वक पढ़ें और इसके लिए सार्थक शब्द का चयन करें। अंडे से जन्म लेने वाला
Ans	<div><div><div>✖</div><div>1. परजीवी</div></div><div><div>✔</div><div>2. अंडज</div></div><div><div>✖</div><div>3. अंबुज</div></div><div><div>✖</div><div>4. पक्षी</div></div></div>
Q.11	इनमें से किस वाक्य में त्रुटि नहीं है?
Ans	<div><div><div>✖</div><div>1. शेर को देख कर उसका प्राण सुख गया।</div></div><div><div>✖</div><div>2. कोयल का कंठ सबसे मधुरतम है।</div></div><div><div>✖</div><div>3. मुझे रोटी खाना है।</div></div><div><div>✔</div><div>4. ऐक्य से उन्नति होती है।</div></div></div>
Q.12	‘सुकर’ का विलोम है-
Ans	<div><div><div>✔</div><div>1. दुष्कर</div></div><div><div>✖</div><div>2. परिष्कार</div></div><div><div>✖</div><div>3. दुष्कृत्य</div></div><div><div>✖</div><div>4. आकर</div></div></div>
Q.13	वायु प्रवाह में नौका तेजी से चल रही थी। वाक्य के भावानुसार विपरीतार्थक शब्द है?
Ans	<div><div><div>✔</div><div>1. प्रतिकूल</div></div><div><div>✖</div><div>2. अनुरूप</div></div><div><div>✖</div><div>3. अनुकूल</div></div><div><div>✖</div><div>4. मनोकूल</div></div></div>
Q.14	निम्नलिखित वाक्य में अशुद्ध शब्द है- वह पेड़ पर नीचे गिरा।
Ans	<div><div><div>✖</div><div>1. नीचे</div></div><div><div>✖</div><div>2. गिरा</div></div><div><div>✔</div><div>3. पर</div></div><div><div>✖</div><div>4. पेड़</div></div></div>
Q.15	उँगली पकड़ कर <u>माथा</u> पकड़ना ।' मुहावरे में रेखांकित शब्द के स्थान पर उपयुक्त शब्द होगा -
Ans	<div><div><div>✖</div><div>1. गला</div></div><div><div>✖</div><div>2. सिर</div></div><div><div>✔</div><div>3. पहुँचा</div></div><div><div>✖</div><div>4. पैर</div></div></div>

**Comprehension:**

निम्नलिखित गद्यांश को पढ़कर प्रश्नों के उत्तर दीजिए-

इधर कुछ वर्षों से 1 में भी एक खास ठहराव 1 आने लगा है। संवेदना और 2 से लेकर जब उनके प्रति अप्रोच और ट्रीटमेंट, भाषा और शैली सभी में एकसापन और एकरसता आने लगती है, तो विधा की अपनी 2 या सार्थकता समाप्ति पर आ जाती है। लगता है आज कहानी, एक ही 3 में एक ही मुहावरा दुहराने लगी है और एक 3 को दूसरी से अलग कर सकना कठिन हो गया है। कहानी जिन प्रतिभाओं के सहयोग से समृद्ध हुई है, वे या तो 4 करके चुप हो गई हैं या लिखते रहने के 4 उनकी चुप्पी मुखर है। किन्हीं एक-दो के साथ हुई घटना को व्यक्तिगत संकट, सामर्थ्य-रिक्तता या प्रतिभा का अक्षम हो जाना कह सकते हैं; लेकिन जब वही घटना 5 रूप में अनेक जगह दुहराई जाए, तो उसे प्रवृत्ति ही मानना होगा, उसके कारण 5 में नहीं समाज में देखने होंगे।

**SubQuestion No : 16**

**Q.16** इधर कुछ वर्षों से 1 में भी एक खास ठहराव---1---आने लगा है। प्रस्तुत अप्रत्यक्ष गद्य लेखन के आधार पर निम्नलिखित वाक्य में रिक्त स्थान 1 में उचित शब्दों का प्रयोग कीजिए?

- Ans**
- ☒ 1. किरण/प्रकाश
  - ☒ 2. कहानी/ नजर
  - ☒ 3. मानव/खाना
  - ☒ 4. अकथ/गद्य

**Comprehension:**

निम्नलिखित गद्यांश को पढ़कर प्रश्नों के उत्तर दीजिए-

इधर कुछ वर्षों से 1 में भी एक खास ठहराव 1 आने लगा है। संवेदना और 2 से लेकर जब उनके प्रति अप्रोच और ट्रीटमेंट, भाषा और शैली सभी में एकसापन और एकरसता आने लगती है, तो विधा की अपनी 2 या सार्थकता समाप्ति पर आ जाती है। लगता है आज कहानी, एक ही 3 में एक ही मुहावरा दुहराने लगी है और एक 3 को दूसरी से अलग कर सकना कठिन हो गया है। कहानी जिन प्रतिभाओं के सहयोग से समृद्ध हुई है, वे या तो 4 करके चुप हो गई हैं या लिखते रहने के 4 उनकी चुप्पी मुखर है। किन्हीं एक-दो के साथ हुई घटना को व्यक्तिगत संकट, सामर्थ्य-रिक्तता या प्रतिभा का अक्षम हो जाना कह सकते हैं; लेकिन जब वही घटना 5 रूप में अनेक जगह दुहराई जाए, तो उसे प्रवृत्ति ही मानना होगा, उसके कारण 5 में नहीं समाज में देखने होंगे।

**SubQuestion No : 17**

**Q.17** संवेदना और 2 से लेकर जब उनके प्रति अप्रोच और ट्रीटमेंट, भाषा और शैली सभी में एकसापन और एकरसता आने लगती है, तो विधा की अपनी 2 या सार्थकता समाप्ति पर आ जाती है। प्रस्तुत अप्रत्यक्ष गद्य लेखन के आधार पर निम्नलिखित वाक्य में रिक्त स्थान 2 में उचित शब्दों का प्रयोग कीजिए?

- Ans**
- ☒ 1. अनुभवों / प्रासंगिकता
  - ☒ 2. इबादत/काम
  - ☒ 3. सहयोग/परोपकार
  - ☒ 4. कृपा/अहसान

**Comprehension:**

निम्नलिखित गद्यांश को पढ़कर प्रश्नों के उत्तर दीजिए-

इधर कुछ वर्षों से 1 में भी एक खास ठहराव 1 आने लगा है। संवेदना और 2 से लेकर जब उनके प्रति अप्रोच और ट्रीटमेंट, भाषा और शैली सभी में एकसापन और एकरसता आने लगती है, तो विधा की अपनी 2 या सार्थकता समाप्ति पर आ जाती है। लगता है आज कहानी, एक ही 3 में एक ही मुहावरा दुहराने लगी है और एक 3 को दूसरी से अलग कर सकना कठिन हो गया है। कहानी जिन प्रतिभाओं के सहयोग से समृद्ध हुई है, वे या तो 4 करके चुप हो गई हैं या लिखते रहने के 4 उनकी चुप्पी मुखर है। किन्हीं एक-दो के साथ हुई घटना को व्यक्तिगत संकट, सामर्थ्य-रिक्तता या प्रतिभा का अक्षम हो जाना कह सकते हैं; लेकिन जब वही घटना 5 रूप में अनेक जगह दुहराई जाए, तो उसे प्रवृत्ति ही मानना होगा, उसके कारण 5 में नहीं समाज में देखने होंगे।

**SubQuestion No : 18**

**Q.18** लगता है आज कहानी, एक ही 3 में एक ही मुहावरा दुहराने लगी है और एक 3 को दूसरी से अलग कर सकना कठिन हो गया है। प्रस्तुत अप्रत्यक्ष गद्य लेखन के आधार पर निम्नलिखित वाक्य में रिक्त स्थान 3 में उचित शब्दों का प्रयोग कीजिए?

- Ans**
- ☒ 1. नफरत/पारिवारिक
  - ☒ 2. प्रयोग/सृजन
  - ☒ 3. भाषा/ कहानी
  - ☒ 4. क्रियान्वयन/वस्तुस्थिति

Comprehension:

निम्नलिखित गद्यांश को पढ़कर प्रश्नों के उत्तर दीजिए-

इधर कुछ वर्षों से 1 में भी एक खास ठहराव 1 आने लगा है। संवेदना और 2 से लेकर जब उनके प्रति अप्रोच और ट्रीटमेंट, भाषा और शैली सभी में एकसापन और एकरसता आने लगती है, तो विधा की अपनी 2 या सार्थकता समाप्ति पर आ जाती है। लगता है आज कहानी, एक ही 3 में एक ही मुहावरा दुहराने लगी है और एक 3 को दूसरी से अलग कर सकना कठिन हो गया है। कहानी जिन प्रतिभाओं के सहयोग से समृद्ध हुई है, वे या तो 4 करके चुप हो गई हैं या लिखते रहने के 4 उनकी चुप्पी मुखर है। किन्हीं एक-दो के साथ हुई घटना को व्यक्तिगत संकट, सामर्थ्य-रिक्तता या प्रतिभा का अक्षम हो जाना कह सकते हैं; लेकिन जब वही घटना 5 रूप में अनेक जगह दुहराई जाए, तो उसे प्रवृत्ति ही मानना होगा, उसके कारण 5 में नहीं समाज में देखने होंगे।

SubQuestion No : 19

Q.19 कहानी जिन प्रतिभाओं के सहयोग से समृद्ध हुई है, वे या तो 4 करके चुप हो गई हैं या लिखते रहने के 4 उनकी चुप्पी मुखर है। प्रस्तुत अप्रत्यक्ष गद्य लेखन के आधार पर निम्नलिखित वाक्य में रिक्त स्थान 4 में उचित शब्दों का प्रयोग कीजिए?

- Ans
- ✓ 1. एक-एक/ बावजूद
  - ✗ 2. समय-सीमा/जगत
  - ✗ 3. समय/काल
  - ✗ 4. निरन्तर/बाद

Comprehension:

निम्नलिखित गद्यांश को पढ़कर प्रश्नों के उत्तर दीजिए-

इधर कुछ वर्षों से 1 में भी एक खास ठहराव 1 आने लगा है। संवेदना और 2 से लेकर जब उनके प्रति अप्रोच और ट्रीटमेंट, भाषा और शैली सभी में एकसापन और एकरसता आने लगती है, तो विधा की अपनी 2 या सार्थकता समाप्ति पर आ जाती है। लगता है आज कहानी, एक ही 3 में एक ही मुहावरा दुहराने लगी है और एक 3 को दूसरी से अलग कर सकना कठिन हो गया है। कहानी जिन प्रतिभाओं के सहयोग से समृद्ध हुई है, वे या तो 4 करके चुप हो गई हैं या लिखते रहने के 4 उनकी चुप्पी मुखर है। किन्हीं एक-दो के साथ हुई घटना को व्यक्तिगत संकट, सामर्थ्य-रिक्तता या प्रतिभा का अक्षम हो जाना कह सकते हैं; लेकिन जब वही घटना 5 रूप में अनेक जगह दुहराई जाए, तो उसे प्रवृत्ति ही मानना होगा, उसके कारण 5 में नहीं समाज में देखने होंगे।

SubQuestion No : 20

Q.20 किन्हीं एक-दो के साथ हुई घटना को व्यक्तिगत संकट, सामर्थ्य-रिक्तता या प्रतिभा का अक्षम हो जाना कह सकते हैं; लेकिन जब वही घटना 5 रूप में अनेक जगह दुहराई जाए, तो उसे प्रवृत्ति ही मानना होगा, उसके कारण 5 में नहीं समाज में देखने होंगे। प्रस्तुत अप्रत्यक्ष गद्य लेखन के आधार पर निम्नलिखित वाक्य में रिक्त स्थान 5 में उचित शब्दों का प्रयोग कीजिए?

- Ans
- ✓ 1. किसी-न-किसी/ साहित्य या लेखक
  - ✗ 2. सत्यवादी-असत्यवादी/ समय-चक्र
  - ✗ 3. युग-युग/देशकाल-वातावरण
  - ✗ 4. विवाद-परेशानी/कारण-अकारण