

Constable GD in CAPFs and SSF Rifleman GD in AR and Sepoy in NCB Examination 2025

Exam Date	13/02/2025
Exam Time	3:00 PM - 4:00 PM
Subject	Constable GD Examination 2025

Section : Part-A-General Intelligence and Reasoning

Q.1 G, H, I, J, M, N and O are sitting around a circular table facing the centre of the table (but not necessarily in the same order). N sits third to the left of I. Only one person sits between I and M when counted from the left of M. Only two people sit between J and O when counted from the right of O. H is an immediate neighbour of J. Who sits third to the right of G?

- Ans**
- ☒ 1. I
 - ☒ 2. O
 - ☒ 3. N
 - ☒ 4. H

Q.2 Eight people are sitting in two parallel rows containing 4 people each, in such a way that there is equal distance between adjacent persons.
In row 1 – M, A, R and K are seated and all of them are facing south
In row 2 – P, O, S and T are seated and all of them are facing north.
Thus each person faces another person from the other row.
T faces the one sitting to the immediate right of M. Only one person sits between T and P. Only two people sit between O and P. P faces the one sitting second to the left of K. R sits at some place to the right of A.
Which of the following options represents both people sitting at the extreme ends of the rows?

- Ans**
- ☒ 1. R and S
 - ☒ 2. A and O
 - ☒ 3. K and P
 - ☒ 4. P and K

Q.3 Select the figure from among the given options that can replace the question mark (?) in the following series.

A	e	e	T	T	
	A		T	e	d
d	T	d	A	d	A

Ans

✗ 1.

T	d
A	e

✗ 2.

A	e
T	d

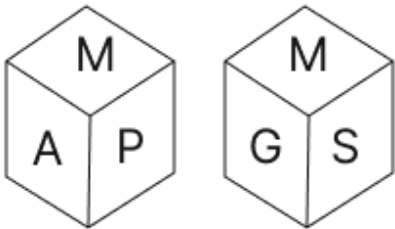
✓ 3.

T	d
e	A

✗ 4.

	e
A	T
	d

Q.4 A dice has its faces marked by letters G, S, M, A, I and P. Two positions of the same dice are shown in the given figures. Which face is opposite to face I?



Ans

✗ 1. P

✗ 2. G

✓ 3. M

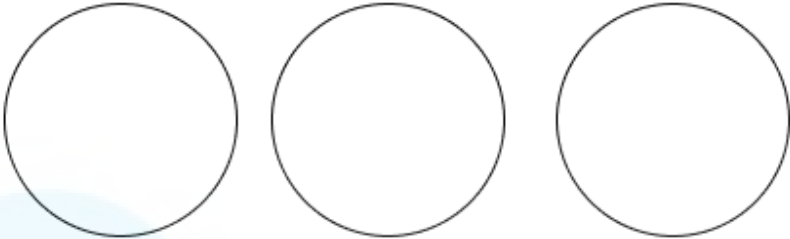
✗ 4. S

Q.5 Select the Venn diagram that best illustrates the relationship among the following classes.

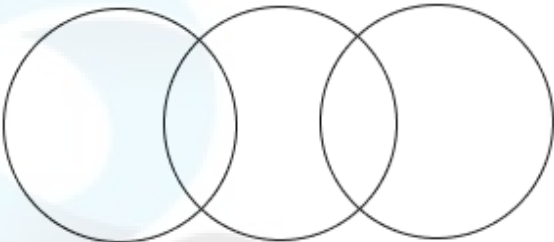
Train, Aeroplane, Scooter

Ans

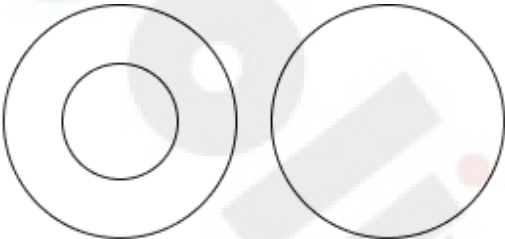
✓ 1.



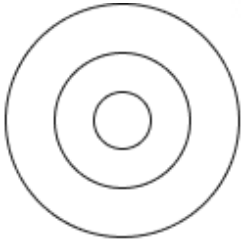
✗ 2.



✗ 3.



✗ 4.



Q.6 In a certain code language, 'CAMS' is coded as '8137' and 'MACK' is coded as '1238'. What is the code for 'K' in the given code language?

Ans

✓ 1. 2

✗ 2. 1

✗ 3. 8

✗ 4. 3

Q.7 What should come in place of the question mark (?) in the given series?

109 119 130 142 155 ?

Ans

✓ 1. 169

✗ 2. 161

✗ 3. 168

✗ 4. 160

Q.8 Based on the English alphabetical order, three of the following four letter-clusters are alike in a certain way and thus form a group. Which letter-cluster DOES NOT belong to that group?

(Note: The odd man out is not based on the number of consonants/vowels or their position in the letter-cluster.)

Ans

✗ 1. UIW

✗ 2. LZN

✗ 3. KYM

✓ 4. HUJ

Q.9 'ZBUP' is related to 'WZSO' in a certain way based on the English alphabetical order. In the same way, 'VSEX' is related to 'SQCW'. To which of the following is 'GMTC' related, following the same logic?

- Ans
- ✓ 1. DKRB
 - ✗ 2. CHSA
 - ✗ 3. CIUB
 - ✗ 4. BJSC

Q.10 The position(s) of how many letters will remain unchanged if each letter in the word CRADLES is arranged in the English alphabetical order?

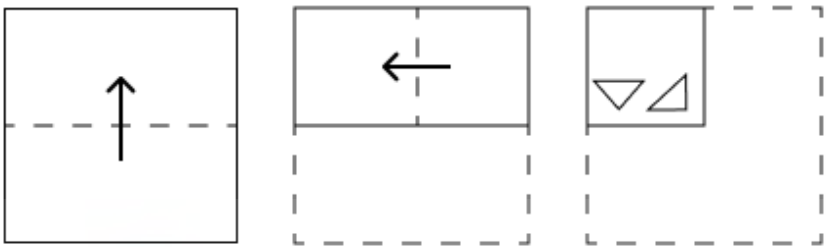
- Ans
- ✓ 1. Two
 - ✗ 2. Three
 - ✗ 3. None
 - ✗ 4. One

Q.11 What will come in the place of the question mark '?' in the following equation, if 'x' and '-' are interchanged and '+' and '÷' are interchanged?

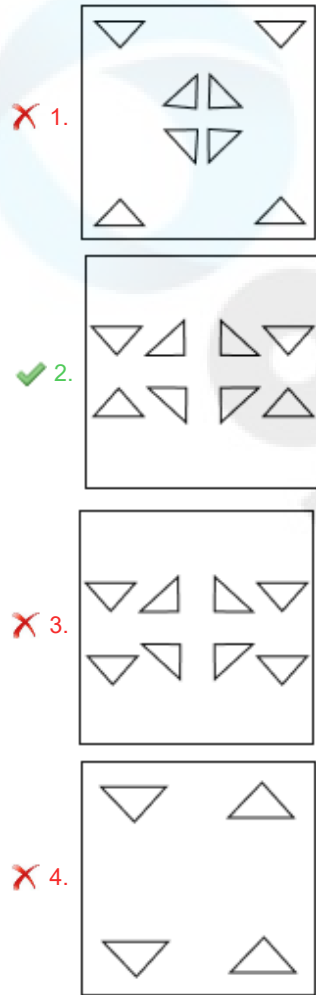
$88 \div 7 \times 4 - 21 + 3 = ?$

- Ans
- ✓ 1. 67
 - ✗ 2. 66
 - ✗ 3. 65
 - ✗ 4. 68

Q.12 A paper is folded and cut as shown below. How will it appear when unfolded?



Ans



Q.13 In a certain code language,

'E + M' means 'E is the sister of M',
'E \$ M' means 'E is the mother of M',
'E @ M' means 'E is the brother of M' and
'E * M' means 'E is the father of M'.

Based on the above, how is T related to O if 'T @ V * I @ O'?

- Ans
- 1. Father
 - 2. Father's brother
 - 3. Mother's mother
 - 4. Mother's sister

Q.14 Select the combination of letters that when filled in the blanks in the same sequence will make the series logically complete.
_GDIF_HMJO_QNSP_RWT_


- Ans
- 1. CJMVZ
 - 2. BJLVY
 - 3. CKMUZ
 - 4. BKLUY

Q.15 Select the option in which the given figure (X) is embedded (rotation is NOT allowed).



Ans

✗ 1.



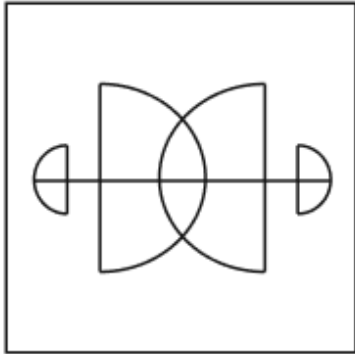
✗ 2.



✗ 3.



✓ 4.



Q.16	<p>What should come in place of the question mark (?) in the given series based on the English alphabetical order?</p> <p>BTD YQA VNX ? PHR</p> <p>Ans <input checked="" type="checkbox"/> 1. RJV</p> <p><input checked="" type="checkbox"/> 2. SKU</p> <p><input checked="" type="checkbox"/> 3. SKV</p> <p><input checked="" type="checkbox"/> 4. RKU</p>
Q.17	<p>What should come in place of the question mark (?) in the given series?</p> <p>823 822 820 817 813 ?</p> <p>Ans <input checked="" type="checkbox"/> 1. 807</p> <p><input checked="" type="checkbox"/> 2. 810</p> <p><input checked="" type="checkbox"/> 3. 808</p> <p><input checked="" type="checkbox"/> 4. 809</p>
Q.18	<p>Read the given statements and conclusions carefully. Assuming that the information given in the statements is true, even if it appears to be at variance with commonly known facts, decide which of the given conclusions logically follow(s) from the statements.</p> <p>Statements: Some wood are chairs. All chairs are tables. No table is a bed.</p> <p>Conclusions: (I): Some wood are table. (II): All chairs are beds.</p> <p>Ans <input checked="" type="checkbox"/> 1. Both conclusions (I) and (II) follow.</p> <p><input checked="" type="checkbox"/> 2. Only conclusion (II) follows.</p> <p><input checked="" type="checkbox"/> 3. Neither conclusion (I) nor (II) follows.</p> <p><input checked="" type="checkbox"/> 4. Only conclusion (I) follows.</p>
Q.19	<p>In a certain code language, 'DAMS' is coded as '7803' and 'MASK' is coded as '0386'. What is the code for 'K' in the given code language?</p> <p>Ans <input checked="" type="checkbox"/> 1. 3</p> <p><input checked="" type="checkbox"/> 2. 8</p> <p><input checked="" type="checkbox"/> 3. 0</p> <p><input checked="" type="checkbox"/> 4. 6</p>
Q.20	<p>KIFG is related to HFCD in a certain way based on the English alphabetical order. In the same way, AYVW is related to XVST. To which of the given options is CAXY related, following the same logic?</p> <p>Ans <input checked="" type="checkbox"/> 1. ZYTB</p> <p><input checked="" type="checkbox"/> 2. ZXTV</p> <p><input checked="" type="checkbox"/> 3. ZXUV</p> <p><input checked="" type="checkbox"/> 4. ZWTV</p>

Section : Part-B-General Knowledge and General awareness

Q.1	<p>Which state does the Indian badminton player Anmol Kharb hail from?</p> <p>Ans <input checked="" type="checkbox"/> 1. Haryana</p> <p><input checked="" type="checkbox"/> 2. Uttar Pradesh</p> <p><input checked="" type="checkbox"/> 3. Maharashtra</p> <p><input checked="" type="checkbox"/> 4. Rajasthan</p>
-----	--

Q.2	As per Census 2011, which of the following religious communities has the least proportion of Indian population?
Ans	<div><div><input type="checkbox"/></div>1. Sikhs</div> <div><div><input checked="" type="checkbox"/></div>2. Jains</div> <div><div><input type="checkbox"/></div>3. Christians</div> <div><div><input type="checkbox"/></div>4. Buddhists</div>
Q.3	How many recipients of the Arjuna Award were there in the inaugural edition of Arjuna Award in 1961?
Ans	<div><div><input type="checkbox"/></div>1. 25</div> <div><div><input checked="" type="checkbox"/></div>2. 20</div> <div><div><input type="checkbox"/></div>3. 18</div> <div><div><input type="checkbox"/></div>4. 22</div>
Q.4	The United Nations declared the year _____ as the 'International Year of Millets'.
Ans	<div><div><input type="checkbox"/></div>1. 2019</div> <div><div><input type="checkbox"/></div>2. 2021</div> <div><div><input checked="" type="checkbox"/></div>3. 2023</div> <div><div><input type="checkbox"/></div>4. 2015</div>
Q.5	Which Russian chemist's periodic table was published in a German magazine in 1872?
Ans	<div><div><input type="checkbox"/></div>1. Lothar Meyer</div> <div><div><input type="checkbox"/></div>2. Henry Moseley</div> <div><div><input checked="" type="checkbox"/></div>3. Dmitri Mendeleev</div> <div><div><input type="checkbox"/></div>4. Johann Wolfgang Dobereiner</div>
Q.6	The temperature does not fall beyond freezing point of water in the northern plains of India in winter because:
Ans	<div><div><input type="checkbox"/></div>1. it is far away from Jammu and Kashmir</div> <div><div><input type="checkbox"/></div>2. of the moderating influence of the sea</div> <div><div><input checked="" type="checkbox"/></div>3. the Himalayas prevent the cold Siberian winds from entering India</div> <div><div><input type="checkbox"/></div>4. of western disturbances during the cold winter season</div>
Q.7	Basal bodies and centrioles show nearly the same fine structure. Which of the following statements sets them apart from each other?
Ans	<div><div><input checked="" type="checkbox"/></div>1. Centrioles possess distal appendages but basal bodies do not carry such things.</div> <div><div><input type="checkbox"/></div>2. Centriole take part in protein synthesis whereas basal bodies are not involved in this.</div> <div><div><input type="checkbox"/></div>3. Basal bodies are protein structures whereas centriole is not at all proteinaceous.</div> <div><div><input type="checkbox"/></div>4. Centriole has membrane but basal bodies are non-membranous.</div>
Q.8	T Balasaraswati, who was a dancer and actress, used to perform which of the following classical dances of India?
Ans	<div><div><input checked="" type="checkbox"/></div>1. Bharatanatyam</div> <div><div><input type="checkbox"/></div>2. Kathak</div> <div><div><input type="checkbox"/></div>3. Odissi</div> <div><div><input type="checkbox"/></div>4. Manipuri</div>
Q.9	People who enrolled in Mahatma Gandhi National Rural Employment Guarantee Act get work for how many days?
Ans	<div><div><input checked="" type="checkbox"/></div>1. 100 days</div> <div><div><input type="checkbox"/></div>2. 125 days</div> <div><div><input type="checkbox"/></div>3. 150 days</div> <div><div><input type="checkbox"/></div>4. 130 days</div>

Q.10	Article 165 of the Constitution of India deals with the appointment of which of the following?
Ans	<div><div><input type="checkbox"/></div>1. Chief Minister</div> <div><div><input type="checkbox"/></div>2. Judges of the High Court</div> <div><div><input checked="" type="checkbox"/></div>3. Advocate General of the State</div> <div><div><input type="checkbox"/></div>4. Chief Justice of the High Court</div>
Q.11	Which Article of the Indian Constitution instructs the State to ensure a uniform civil code for all citizens?
Ans	<div><div><input type="checkbox"/></div>1. Article 48</div> <div><div><input type="checkbox"/></div>2. Article 42</div> <div><div><input type="checkbox"/></div>3. Article 46</div> <div><div><input checked="" type="checkbox"/></div>4. Article 44</div>
Q.12	As of September 2024, who is serving as the Minister of Parliamentary Affairs in the Government of India?
Ans	<div><div><input type="checkbox"/></div>1. Tenzin Gyaltzen</div> <div><div><input checked="" type="checkbox"/></div>2. Kiren Rijju</div> <div><div><input type="checkbox"/></div>3. L Murugan</div> <div><div><input type="checkbox"/></div>4. Arjun Ram</div>
Q.13	Which title was given to Begum Akhtar?
Ans	<div><div><input checked="" type="checkbox"/></div>1. Queen of Ghazals</div> <div><div><input type="checkbox"/></div>2. Queen of Thumris</div> <div><div><input type="checkbox"/></div>3. Queen of Khayals</div> <div><div><input type="checkbox"/></div>4. Queen Of Qawwalis</div>
Q.14	Which ruler of Haryanka Dynasty annexed several important and powerful kingdoms in its vicinity such as Kosala, Kashi and Vajji?
Ans	<div><div><input type="checkbox"/></div>1. Nagadarshaka</div> <div><div><input type="checkbox"/></div>2. Shishunaga</div> <div><div><input type="checkbox"/></div>3. Udayabhadra</div> <div><div><input checked="" type="checkbox"/></div>4. Ajatashatru</div>
Q.15	Which of the following is a benefit of e-commerce?
Ans	<div><div><input type="checkbox"/></div>1. Limited choice of products</div> <div><div><input type="checkbox"/></div>2. Higher operating costs</div> <div><div><input checked="" type="checkbox"/></div>3. Wider market reach</div> <div><div><input type="checkbox"/></div>4. Reduced customer services</div>
Q.16	Which model was the First Five-Year Plan based on?
Ans	<div><div><input checked="" type="checkbox"/></div>1. Harrod-Domar Model</div> <div><div><input type="checkbox"/></div>2. Gandhian Model</div> <div><div><input type="checkbox"/></div>3. Keynesian Model</div> <div><div><input type="checkbox"/></div>4. Mahalanobis Model</div>
Q.17	During the 1930s, Lord Zetland played a significant role in which of the following events related to India's constitutional reforms?
Ans	<div><div><input type="checkbox"/></div>1. Simon Commission</div> <div><div><input type="checkbox"/></div>2. Quit India Movement</div> <div><div><input checked="" type="checkbox"/></div>3. Round Table Conferences</div> <div><div><input type="checkbox"/></div>4. Cabinet Mission Plan</div>

Q.18	Which festival is celebrated in the Indian state of Tamil Nadu as a harvest festival dedicated to the Sun God?
Ans	<div> <div>✗</div> <div>1. Makar Sankranti</div> </div> <div> <div>✓</div> <div>2. Pongal</div> </div> <div> <div>✗</div> <div>3. Magh Bihu</div> </div> <div> <div>✗</div> <div>4. Vaisakhi</div> </div>
Q.19	Rajashree Shirke was awarded Sangeet Natak Akademi for her contribution to which of the following dance forms?
Ans	<div> <div>✗</div> <div>1. Manipuri</div> </div> <div> <div>✗</div> <div>2. Odissi</div> </div> <div> <div>✓</div> <div>3. Kathak</div> </div> <div> <div>✗</div> <div>4. Kuchipudi</div> </div>
Q.20	What is the eligibility criteria of annual income for EWS households' families under Pradhan Mantri Awas Yojana-Urban (PMAY-U) 2.0?
Ans	<div> <div>✗</div> <div>1. ₹7 lakh up to ₹9 lakh</div> </div> <div> <div>✗</div> <div>2. up to ₹6 lakh</div> </div> <div> <div>✗</div> <div>3. ₹6 lakh up to ₹9 lakh</div> </div> <div> <div>✓</div> <div>4. up to ₹3 lakh</div> </div>

Section : Part-C-Elementary Mathematics

Q.1	If the radius of a cylindrical tank is 7 m and its height is 9 m, then find the capacity of the tank (in m ³). (Use $\pi = 22/7$)
Ans	<div> <div>✗</div> <div>1. 1396</div> </div> <div> <div>✓</div> <div>2. 1386</div> </div> <div> <div>✗</div> <div>3. 1376</div> </div> <div> <div>✗</div> <div>4. 1366</div> </div>
Q.2	The price of fuel decreases by 10%, 50% and 50% in three successive months, but increases by 45% in the fourth month. What is the percentage increase/decrease in the price of fuel in the fourth month as compared to its original price?
Ans	<div> <div>✗</div> <div>1. Increases by 73.86%</div> </div> <div> <div>✗</div> <div>2. Decreases by 67.02%</div> </div> <div> <div>✓</div> <div>3. Decreases by 67.38%</div> </div> <div> <div>✗</div> <div>4. Increases by 68.74%</div> </div>
Q.3	Which of the following numbers must be added to each of the numbers 9, 16, 13 and 23 so that the resulting numbers are in proportion?
Ans	<div> <div>✗</div> <div>1. $\frac{2}{5}$</div> </div> <div> <div>✗</div> <div>2. $\frac{2}{3}$</div> </div> <div> <div>✓</div> <div>3. $\frac{1}{3}$</div> </div> <div> <div>✗</div> <div>4. $\frac{1}{2}$</div> </div>

Q.4	Find the value of $\left[(23 \times 12) \times \left\{ 6 \div 2 \times \frac{(18 - 12)}{2} \right\} \right]$
Ans	<div> <div>✗ 1. 2465</div> <div>✗ 2. 2487</div> <div>✓ 3. 2484</div> <div>✗ 4. 2489</div> </div>
Q.5	When difference between compound and simple interest for three years is ₹155 at 10% interest per annum, the principal is ₹_____
Ans	<div> <div>✗ 1. 4425</div> <div>✗ 2. 5420</div> <div>✓ 3. 5000</div> <div>✗ 4. 6200</div> </div>
Q.6	Nivedita buys 6 kg of coffee powder for ₹2,730 per kg and another 12 kg of coffee powder for ₹1,002 per kg. What is the per kg cost (in ₹) of the mixture of 18 kg of coffee powder for her?
Ans	<div> <div>✗ 1. 1,612</div> <div>✓ 2. 1,578</div> <div>✗ 3. 1,538</div> <div>✗ 4. 1,563</div> </div>
Q.7	If 2% of x = 252, then x is equal to:
Ans	<div> <div>✓ 1. 12600</div> <div>✗ 2. 25300</div> <div>✗ 3. 12700</div> <div>✗ 4. 25200</div> </div>
Q.8	An article is bought for ₹5,000 and sold for ₹6,200. Find the profit percentage.
Ans	<div> <div>✗ 1. 20%</div> <div>✓ 2. 24%</div> <div>✗ 3. 22%</div> <div>✗ 4. 18%</div> </div>
Q.9	Two trains having lengths of 410 m and 390 m are running at speeds of 80 km/h and 100 km/h, respectively, in the same direction. The time taken (in minutes) by the faster train, coming from behind, to completely cross the other train is:
Ans	<div> <div>✗ 1. 2.6</div> <div>✗ 2. 1.2</div> <div>✓ 3. 2.4</div> <div>✗ 4. 3.4</div> </div>
Q.10	A man goes to Chennai from Hyderabad at a speed of 24km/hr and returns to Hyderabad at speed of 40km/hr, through same route. What is his average speed (in km/hr) of the entire journey?
Ans	<div> <div>✗ 1. 27</div> <div>✗ 2. 35</div> <div>✗ 3. 31</div> <div>✓ 4. 30</div> </div>

Q.11	The average pocket money of three children X, Y and Z of a family is ₹2,500 in a particular month. Y spends double and Z spends triple of what X spends during that month. If the average of their unspent money is ₹2,100, then X spends (in ₹):
Ans	<div><div><div>✗</div><div>1. 400</div></div><div><div>✗</div><div>2. 600</div></div><div><div>✓</div><div>3. 200</div></div><div><div>✗</div><div>4. 300</div></div></div>
Q.12	Evaluate: $16 + 9 \div 3 - 2 \times 4$
Ans	<div><div><div>✓</div><div>1. 11</div></div><div><div>✗</div><div>2. 14</div></div><div><div>✗</div><div>3. 10</div></div><div><div>✗</div><div>4. 13</div></div></div>
Q.13	The marked price of a chair was ₹19,200. The shopkeeper was offering it for a discount of 20%, but on further bargaining agreed to offer a successive discount and finally sold the chair for ₹13,824. What was the second discount offered by the shopkeeper?
Ans	<div><div><div>✗</div><div>1. 15%</div></div><div><div>✓</div><div>2. 10%</div></div><div><div>✗</div><div>3. 20%</div></div><div><div>✗</div><div>4. 5%</div></div></div>
Q.14	Fifty-four men can complete a work in 48 days. After 8 days of working, thirty-six more men joined them. How many days will they now take to complete the remaining work?
Ans	<div><div><div>✓</div><div>1. 24</div></div><div><div>✗</div><div>2. 20</div></div><div><div>✗</div><div>3. 32</div></div><div><div>✗</div><div>4. 28</div></div></div>
Q.15	Siddhant invested some money in HDFC at 4% per annum rate of interest. What would be the corresponding simple interest (in ₹) if after 2 years, Siddhant got ₹255 as compound interest, considering annual compounding?
Ans	<div><div><div>✗</div><div>1. 245</div></div><div><div>✓</div><div>2. 250</div></div><div><div>✗</div><div>3. 265</div></div><div><div>✗</div><div>4. 260</div></div></div>
Q.16	When 12, 15, 18, 20 and 25 divide the least number x, the remainder in each case was 5 but x was divisible by 7. What is the value of x?
Ans	<div><div><div>✗</div><div>1. 3065</div></div><div><div>✓</div><div>2. 3605</div></div><div><div>✗</div><div>3. 3506</div></div><div><div>✗</div><div>4. 3560</div></div></div>
Q.17	The LCM of 16, 21, 364 and 156 is:
Ans	<div><div><div>✗</div><div>1. 4455</div></div><div><div>✓</div><div>2. 4368</div></div><div><div>✗</div><div>3. 4322</div></div><div><div>✗</div><div>4. 4425</div></div></div>

Q.18 A, B, C and D, working separately, can do a piece of work in 5 days, 6 days, 8 days and 10 days, respectively. In how many days can A and B complete the work together, if they are assisted by C and D on alternate days, starting with C?

- Ans
- ☒ 1. $3\frac{4}{25}$ days
 - ☒ 2. $1\frac{7}{68}$ days
 - ☒ 3. $2\frac{5}{59}$ days
 - ☒ 4. $4\frac{5}{27}$ days

Q.19 400 mangoes were bought at ₹1220 per hundred and were sold at a profit of ₹820. Find the selling price (in ₹) per dozen of mangoes.

- Ans
- ☒ 1. 171
 - ☒ 2. 186
 - ☒ 3. 161
 - ☒ 4. 181

Q.20 The simple interest on a principal amount (in ₹) is ₹888 for a period of 8 years at the rate of 2% per annum. The principal amount (in ₹) is:

- Ans
- ☒ 1. 5544
 - ☒ 2. 5546
 - ☒ 3. 5540
 - ☒ 4. 5550

Section : Part-D-English

Q.1 Select the most appropriate ANTONYM of the given word.

Laconic

- Ans
- ☒ 1. Verbose
 - ☒ 2. Terse
 - ☒ 3. Succinct
 - ☒ 4. Concise

Q.2 Select the most appropriate option to substitute the underlined phrase in the given sentence.

Mani decided to take a rain check on the dinner invitation.

- Ans
- ☒ 1. to invite someone
 - ☒ 2. accept the offer
 - ☒ 3. make the final decision
 - ☒ 4. delay the decision

Q.3 Select the INCORRECTLY spelt word from the given sentence.

Her arguement was well-reasoned, but it contained a few misspellings.

- Ans
- ☒ 1. misspellings
 - ☒ 2. well-reasoned
 - ☒ 3. contained
 - ☒ 4. arguement

Q.4	Select the most appropriate synonym of the underlined word. The orchestra's <u>melodious</u> performance enchanted the audience.
Ans	<div><div><input checked="" type="checkbox"/></div>1. Cacophonous</div> <div><div><input checked="" type="checkbox"/></div>2. Discordant</div> <div><div><input checked="" type="checkbox"/></div>3. Dissonant</div> <div><div><input checked="" type="checkbox"/></div>4. Harmonious</div>
Q.5	The following sentence has been divided into parts. One of them may contain an error. Select the part that contains the error from the given options. If you don't find any error, mark 'No error' as your answer. The language of the foreign delegate was full extraordinary;/ only a few could understand his speech/ last evening.
Ans	<div><div><input checked="" type="checkbox"/></div>1. The language of the foreign delegate was full extraordinary;</div> <div><div><input checked="" type="checkbox"/></div>2. only a few could understand his speech</div> <div><div><input checked="" type="checkbox"/></div>3. last evening.</div> <div><div><input checked="" type="checkbox"/></div>4. No error.</div>
Q.6	Select the most appropriate option to fill in the blank. The firing process used in terracotta production typically requires lower temperatures _____ to other ceramics and building materials like concrete or metals.
Ans	<div><div><input checked="" type="checkbox"/></div>1. attempted</div> <div><div><input checked="" type="checkbox"/></div>2. harmony</div> <div><div><input checked="" type="checkbox"/></div>3. compared</div> <div><div><input checked="" type="checkbox"/></div>4. equated</div>
Q.7	Select the most appropriate option to fill in the blank. Ladakh is shifting towards self-sufficiency in _____ food and crop market.
Ans	<div><div><input checked="" type="checkbox"/></div>1. an</div> <div><div><input checked="" type="checkbox"/></div>2. the</div> <div><div><input checked="" type="checkbox"/></div>3. this</div> <div><div><input checked="" type="checkbox"/></div>4. these</div>
Q.8	Select the most appropriate phrase that can substitute the underlined segment in the given sentence without altering the sentence's meaning. The artist's latest exhibition was <u>a stark departure</u> from her previous work, characterised by its bold use of colour and abstract forms.
Ans	<div><div><input checked="" type="checkbox"/></div>1. a drastic shift</div> <div><div><input checked="" type="checkbox"/></div>2. a subtle continuation</div> <div><div><input checked="" type="checkbox"/></div>3. a minor change</div> <div><div><input checked="" type="checkbox"/></div>4. a gentle evolution</div>
Q.9	Select the most appropriate option to fill in the blank. As the hikers ventured _____ into the dense forest, the sounds of civilisation faded away.
Ans	<div><div><input checked="" type="checkbox"/></div>1. further</div> <div><div><input checked="" type="checkbox"/></div>2. father</div> <div><div><input checked="" type="checkbox"/></div>3. farther</div> <div><div><input checked="" type="checkbox"/></div>4. feather</div>

Q.10	Select the most appropriate meaning of the given word. Elated
Ans	<div><div><div>✖</div><div>1. Feeling tired and drained</div></div><div><div>✔</div><div>2. Extremely happy and excited</div></div><div><div>✖</div><div>3. Deeply worried and anxious</div></div><div><div>✖</div><div>4. Indifferent or uninterested</div></div></div>
Q.11	Select the option that rectifies the spelling error in the given sentence. The serene osterity of the compound had a unique charm.
Ans	<div><div><div>✖</div><div>1. Aughsterity</div></div><div><div>✖</div><div>2. Asterity</div></div><div><div>✔</div><div>3. Austerity</div></div><div><div>✖</div><div>4. Ousterity</div></div></div>
Q.12	Select the word that best completes the given sentence. Determine the collocation through the sentence. Vismi had an _____ fantastic time at the Hyderabad Book Fair.
Ans	<div><div><div>✖</div><div>1. elegantly</div></div><div><div>✖</div><div>2. warmly</div></div><div><div>✖</div><div>3. exactly</div></div><div><div>✔</div><div>4. absolutely</div></div></div>
Q.13	Select the most appropriate meaning of the underlined idiom. The contractor realised that he could not get the contract unless he <u>greases the palms</u> of the officials.
Ans	<div><div><div>✖</div><div>1. To bear the brunt</div></div><div><div>✖</div><div>2. To come to a stop</div></div><div><div>✖</div><div>3. To deprive one of one's power</div></div><div><div>✔</div><div>4. To bribe</div></div></div>
Q.14	The following sentence has been divided into parts. Select the part that contains a grammatical error from the given options. If you don't find any error, mark 'No error' as your answer. Isaac Newton, a name that may still be seen / today, cut into the wood of a window-sill at / the king's school, where he study Grammar and Latin.
Ans	<div><div><div>✖</div><div>1. today, cut into the wood of a window-sill at</div></div><div><div>✖</div><div>2. No error.</div></div><div><div>✔</div><div>3. the King's school, where he study Grammar and Latin.</div></div><div><div>✖</div><div>4. Isaac Newton, a name that may still be seen</div></div></div>
Q.15	Select the most appropriate ANTONYM of the given word. Callous
Ans	<div><div><div>✖</div><div>1. Careless</div></div><div><div>✖</div><div>2. Insensitive</div></div><div><div>✖</div><div>3. Apathetic</div></div><div><div>✔</div><div>4. Merciful</div></div></div>

Comprehension:

In the following passage, some words have been deleted. Read the passage carefully and select the most appropriate option to fill in each blank.

Reducing the hours worked and optimising shift rostering could (1) alleviate stress, burnout and work family (2) for healthcare workers. All this is likely to improve staff retention. Any reduction (3) staff turnaround would save on direct costs associated (4) hiring new staff. The cost to replace a highly specialised healthcare professional can reach up to 200% of their annual salary. Also, (5) shorter shifts may increase the uptake of shift times that are usually hard to fill. Measures like shorter shifts could also appeal to part time workers or those who have retired.

SubQuestion No : 16

Q.16 Select the most appropriate option to fill in blank no. 1.

- Ans
- ☒ 1. host
 - ☒ 2. help
 - ☒ 3. hive
 - ☒ 4. heal

Comprehension:

In the following passage, some words have been deleted. Read the passage carefully and select the most appropriate option to fill in each blank.

Reducing the hours worked and optimising shift rostering could (1) alleviate stress, burnout and work family (2) for healthcare workers. All this is likely to improve staff retention. Any reduction (3) staff turnaround would save on direct costs associated (4) hiring new staff. The cost to replace a highly specialised healthcare professional can reach up to 200% of their annual salary. Also, (5) shorter shifts may increase the uptake of shift times that are usually hard to fill. Measures like shorter shifts could also appeal to part time workers or those who have retired.

SubQuestion No : 17

Q.17 Select the most appropriate option to fill in blank no. 2.

- Ans
- ☒ 1. conflict
 - ☒ 2. addict
 - ☒ 3. evict
 - ☒ 4. inflict

Comprehension:

In the following passage, some words have been deleted. Read the passage carefully and select the most appropriate option to fill in each blank.

Reducing the hours worked and optimising shift rostering could (1) alleviate stress, burnout and work family (2) for healthcare workers. All this is likely to improve staff retention. Any reduction (3) staff turnaround would save on direct costs associated (4) hiring new staff. The cost to replace a highly specialised healthcare professional can reach up to 200% of their annual salary. Also, (5) shorter shifts may increase the uptake of shift times that are usually hard to fill. Measures like shorter shifts could also appeal to part time workers or those who have retired.

SubQuestion No : 18

Q.18 Select the most appropriate option to fill in blank no. 3.

- Ans
- ☒ 1. in
 - ☐ 2. about
 - ☐ 3. at
 - ☐ 4. off

Comprehension:

In the following passage, some words have been deleted. Read the passage carefully and select the most appropriate option to fill in each blank.

Reducing the hours worked and optimising shift rostering could (1) alleviate stress, burnout and work family (2) for healthcare workers. All this is likely to improve staff retention. Any reduction (3) staff turnaround would save on direct costs associated (4) hiring new staff. The cost to replace a highly specialised healthcare professional can reach up to 200% of their annual salary. Also, (5) shorter shifts may increase the uptake of shift times that are usually hard to fill. Measures like shorter shifts could also appeal to part time workers or those who have retired.

SubQuestion No : 19

Q.19 Select the most appropriate option to fill in blank no. 4.

- Ans
- ☐ 1. about
 - ☐ 2. behind
 - ☐ 3. on
 - ☒ 4. with

Comprehension:

In the following passage, some words have been deleted. Read the passage carefully and select the most appropriate option to fill in each blank.

Reducing the hours worked and optimising shift rostering could (1) _____ alleviate stress, burnout and work family (2) _____ for healthcare workers. All this is likely to improve staff retention. Any reduction (3) _____ staff turnaround would save on direct costs associated (4) _____ hiring new staff. The cost to replace a highly specialised healthcare professional can reach up to 200% of their annual salary. Also, (5) _____ shorter shifts may increase the uptake of shift times that are usually hard to fill. Measures like shorter shifts could also appeal to part time workers or those who have retired.

SubQuestion No : 20

Q.20 Select the most appropriate option to fill in blank no. 5.

- Ans
- ☒ 1. implementing
 - ☐ 2. complimenting
 - ☐ 3. rectifying
 - ☐ 4. simplifying

Section : Part-D-Hindi

Q.1 निम्न में से 'अप्सरा' का पर्याय नहीं है-

- Ans
- ☐ 1. देवबाला
 - ☐ 2. देवांगना
 - ☒ 3. वामा
 - ☐ 4. सुरसुंदरी

Q.2 'हमें मुश्किल वक्त में _____ नहीं खोना चाहिए।' रिक्त स्थान की पूर्ति के लिए तद्भव शब्द होगा -

- Ans
- ☐ 1. सत्य
 - ☐ 2. कार्य
 - ☐ 3. धैर्य
 - ☒ 4. धीरज

Q.3 'एक म्यान में चार तलवार होना।' मुहावरे में रेखांकित शब्द के स्थान पर उपयुक्त शब्द होगा -

- Ans
- ☐ 1. तीन
 - ☐ 2. पांच
 - ☐ 3. चार
 - ☒ 4. दो

Q.4 जिसका आचरण अच्छा न हो' वाक्य हेतु सार्थक शब्द है-

- Ans
- ☐ 1. परिश्रमी
 - ☐ 2. परोपकारी
 - ☐ 3. भ्रष्टाचारी
 - ☒ 4. दुराचारी

Q.5 जमुना शब्द में कौन सी संज्ञा है?

- Ans
- ☒ 1. व्यक्तिवाचक
 - ☐ 2. भाववाचक
 - ☐ 3. जातिवाचक
 - ☐ 4. समूहवाचक

Q.6	निम्नलिखित में से कौन-सा शब्द विदेशज नहीं है?
Ans	<div><div><div>✗</div><div>1. हमला</div></div><div><div>✗</div><div>2. बेगम</div></div><div><div>✗</div><div>3. किताब</div></div><div><div>✓</div><div>4. केला</div></div></div>
Q.7	निम्नलिखित में से किस वाक्य में लिंग सम्बन्धी अशुद्धि है?
Ans	<div><div><div>✗</div><div>1. तुम्हारे माँ-बाप क्या काम करते हैं?</div></div><div><div>✗</div><div>2. प्रार्थना-पत्र यहाँ रखा है।</div></div><div><div>✗</div><div>3. दिन का समय सोकर नहीं बिताना चाहिए।</div></div><div><div>✓</div><div>4. यह साहित्य पढ़ना, बहुत अच्छी है।</div></div></div>
Q.8	निम्नलिखित वाक्य के किस खंड में अशुद्धि है? कारगिल युद्ध में सेना विरता के साथ लड़ी।
Ans	<div><div><div>✓</div><div>1. विरता</div></div><div><div>✗</div><div>2. कारगिल</div></div><div><div>✗</div><div>3. लड़ी</div></div><div><div>✗</div><div>4. युद्ध</div></div></div>
Q.9	इनमें से किस वाक्य में त्रुटि नहीं है?
Ans	<div><div><div>✗</div><div>1. उसके पास केवल दस रुपये मात्र हैं।</div></div><div><div>✗</div><div>2. इस समय मेरा जीवन बीस वर्ष है।</div></div><div><div>✓</div><div>3. इस समय मेरी अवस्था बीस वर्ष है।</div></div><div><div>✗</div><div>4. माली एक फूलों की माला लाया।</div></div></div>
Q.10	निम्नलिखित वाक्यांश को एक सार्थक शब्द से प्रतिस्थापित कीजिए- 'जो सदा से चला आ रहा हो'
Ans	<div><div><div>✓</div><div>1. चिरंतन</div></div><div><div>✗</div><div>2. टिकाऊ</div></div><div><div>✗</div><div>3. कालांतर</div></div><div><div>✗</div><div>4. जिगीषा</div></div></div>
Q.11	'जो भूमि उपजाऊ हो' -- वाक्यांश के लिए एक शब्द का चयन करें-
Ans	<div><div><div>✗</div><div>1. ऊसर</div></div><div><div>✓</div><div>2. उर्वरा</div></div><div><div>✗</div><div>3. सर्वरा</div></div><div><div>✗</div><div>4. धूसर</div></div></div>
Q.12	रेखांकित शब्द के स्थान पर सर्वोचित विकल्प चुनिए। जब सर्दी लगे तब <u>रज़ाई</u> ओढ़ लेना।
Ans	<div><div><div>✗</div><div>1. चादर</div></div><div><div>✓</div><div>2. कंबल</div></div><div><div>✗</div><div>3. परदा</div></div><div><div>✗</div><div>4. तौलिया</div></div></div>

Q.13 निम्नलिखित वाक्य में चिह्नित शब्द के स्थान पर उचित पर्यायवाची शब्द का चुनाव करें।
परिश्रम करके संकलपूर्ति प्राप्त करो।

- Ans
- ☒ 1. जीत
 - ☒ 2. विजय
 - ☒ 3. सफलता
 - ☒ 4. फतह

Q.14 'सुजय महिमा से द्वेष करने लगा।' इस वाक्य में प्रयुक्त 'द्वेष' शब्द का विलोम निम्न में से कौनसा शब्द है?

- Ans
- ☒ 1. घृणा
 - ☒ 2. ईर्ष्या
 - ☒ 3. प्रीति
 - ☒ 4. विरोध

Q.15 निम्नलिखित विकल्पों में से 'कड़ा' शब्द के लिए किस एक वाक्य में उचित विलोम का प्रयोग हुआ है?

- Ans
- ☒ 1. अभिषेक तैर सकता है।
 - ☒ 2. अंजली नृत्य में कुशल है।
 - ☒ 3. नीलिमा का स्वभाव मुलायम है।
 - ☒ 4. प्रशासन ने आज बहुत कठोर कदम उठाया है।

Comprehension:

प्रश्न संख्या 1 से 5 तक इसी अनुच्छेद से करें।

साहित्य और कला मानव अभिव्यक्तियाँ हैं। इनका मानव-विकास के इतिहास में अमूल्य _____ (1) है। डॉ. हरद्वारी लाल शर्मा ने लिखा है कि -“हमारी अनुभूति का सारा अन्तः प्रदेश मुखर या शब्दार्थमय नहीं होता। जितना भाग शब्दार्थ के _____ (2) से 'शरीरी' होता है, उतना _____ (3) बन जाता है किन्तु इसका एक बड़ा भाग अनुभूतिगम्य होते हुए भी 'अर्थ' (Meaning) की _____ (4) को नहीं पहुँचता, उसके लिये हमारे पास 'शब्द' की कमी रह जाती है। यह अन्तः प्रदेश का वह भाग है जो ध्वनि, गति, रंग रखा, आदि के माध्यम से व्यक्त होता है। इन्हीं अभिव्यक्तियों का नाम _____ (5) है।”

SubQuestion No : 16

Q.16 रिक्त स्थान के लिए सही विकल्प चुनें।(1)

- Ans
- ☒ 1. श्रमदान
 - ☒ 2. योगदान
 - ☒ 3. अवदान
 - ☒ 4. सलाह

Comprehension:

प्रश्न संख्या 1 से 5 तक इसी अनुच्छेद से करें।

साहित्य और कला मानव अभिव्यक्तियाँ हैं। इनका मानव-विकास के इतिहास में अमूल्य _____ (1) है। डॉ. हरद्वारी लाल शर्मा ने लिखा है कि -“हमारी अनुभूति का सारा अन्तः प्रदेश मुखर या शब्दार्थमय नहीं होता। जितना भाग शब्दार्थ के _____ (2) से 'शरीरी' होता है, उतना _____ (3) बन जाता है किन्तु इसका एक बड़ा भाग अनुभूतिगम्य होते हुए भी 'अर्थ' (Meaning) की _____ (4) को नहीं पहुँचता, उसके लिये हमारे पास 'शब्द' की कमी रह जाती है। यह अन्तः प्रदेश का वह भाग है जो ध्वनि, गति, रंग रखा, आदि के माध्यम से व्यक्त होता है। इन्हीं अभिव्यक्तियों का नाम _____ (5) है।”

SubQuestion No : 17

Q.17 रिक्त स्थान के लिए सही विकल्प चुनें।(2)

- Ans
- ☒ 1. द्वार
 - ☒ 2. साधन
 - ☒ 3. माध्यम
 - ☒ 4. कारण

Comprehension:

प्रश्न संख्या 1 से 5 तक इसी अनुच्छेद से करें।

साहित्य और कला मानव अभिव्यक्तियाँ हैं। इनका मानव-विकास के इतिहास में अमूल्य _____ (1) है। डॉ. हरद्वारी लाल शर्मा ने लिखा है कि -“हमारी अनुभूति का सारा अन्तः प्रदेश मुखर या शब्दार्थमय नहीं होता। जितना भाग शब्दार्थ के _____ (2) से ‘शरीरी’ होता है, उतना _____ (3) बन जाता है किन्तु इसका एक बड़ा भाग अनुभूतिगम्य होते हुए भी ‘अर्थ’ (Meaning) की _____ (4) को नहीं पहुँचता, उसके लिये हमारे पास ‘शब्द’ की कमी रह जाती है। यह अन्तः प्रदेश का वह भाग है जो ध्वनि, गति, रंग रखा, आदि के माध्यम से व्यक्त होता है। इन्हीं अभिव्यक्तियों का नाम _____ (5) है।”

SubQuestion No : 18

Q.18 रिक्त स्थान के लिए सही विकल्प चुनें।(3)

- Ans
- ☒ 1. निबंध
 - ☒ 2. साहित्य
 - ☒ 3. महत्त्वपूर्ण
 - ☒ 4. संस्करण

Comprehension:

प्रश्न संख्या 1 से 5 तक इसी अनुच्छेद से करें।

साहित्य और कला मानव अभिव्यक्तियाँ हैं। इनका मानव-विकास के इतिहास में अमूल्य _____ (1) है। डॉ. हरद्वारी लाल शर्मा ने लिखा है कि -“हमारी अनुभूति का सारा अन्तः प्रदेश मुखर या शब्दार्थमय नहीं होता। जितना भाग शब्दार्थ के _____ (2) से ‘शरीरी’ होता है, उतना _____ (3) बन जाता है किन्तु इसका एक बड़ा भाग अनुभूतिगम्य होते हुए भी ‘अर्थ’ (Meaning) की _____ (4) को नहीं पहुँचता, उसके लिये हमारे पास ‘शब्द’ की कमी रह जाती है। यह अन्तः प्रदेश का वह भाग है जो ध्वनि, गति, रंग रखा, आदि के माध्यम से व्यक्त होता है। इन्हीं अभिव्यक्तियों का नाम _____ (5) है।”

SubQuestion No : 19

Q.19 रिक्त स्थान के लिए सही विकल्प चुनें।(4)

- Ans
- ☒ 1. स्थिरता
 - ☒ 2. महत्ता
 - ☒ 3. सहायता
 - ☒ 4. स्पष्टता

Comprehension:

प्रश्न संख्या 1 से 5 तक इसी अनुच्छेद से करें।

साहित्य और कला मानव अभिव्यक्तियाँ हैं। इनका मानव-विकास के इतिहास में अमूल्य _____ (1) है। डॉ. हरद्वारी लाल शर्मा ने लिखा है कि -“हमारी अनुभूति का सारा अन्तः प्रदेश मुखर या शब्दार्थमय नहीं होता। जितना भाग शब्दार्थ के _____ (2) से ‘शरीरी’ होता है, उतना _____ (3) बन जाता है किन्तु इसका एक बड़ा भाग अनुभूतिगम्य होते हुए भी ‘अर्थ’ (Meaning) की _____ (4) को नहीं पहुँचता, उसके लिये हमारे पास ‘शब्द’ की कमी रह जाती है। यह अन्तः प्रदेश का वह भाग है जो ध्वनि, गति, रंग रखा, आदि के माध्यम से व्यक्त होता है। इन्हीं अभिव्यक्तियों का नाम _____ (5) है।”

SubQuestion No : 20

Q.20 रिक्त स्थान के लिए सही विकल्प चुनें।(5)

- Ans
- ☒ 1. कला
 - ☒ 2. दर्शन
 - ☒ 3. कविता
 - ☒ 4. विज्ञान