

Constable GD in CAPFs and SSF Rifleman GD in AR and Sepoy in NCB Examination 2025


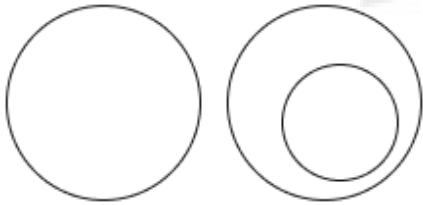
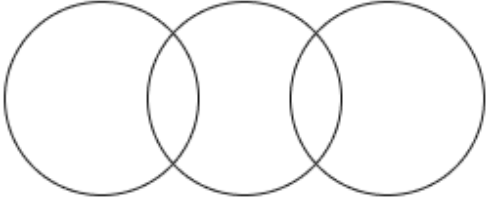
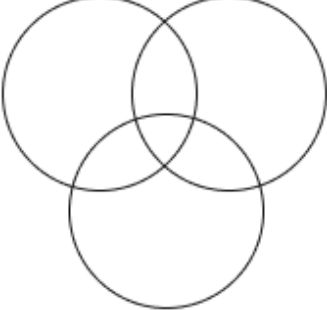
Exam Date	19/02/2025
Exam Time	3:00 PM - 4:00 PM
Subject	Constable GD Examination 2025

Section : Part-A-General Intelligence and Reasoning

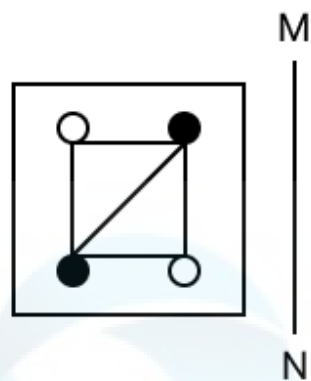
Q.1 A, B, C, D, E, F and G are sitting around a circular table facing the centre (but not necessarily in the same order) . G is sitting to the immediate left of B. E is sitting to the immediate left of G. C is sitting to the immediate left of E. F is sitting to the immediate right of D and the immediate left of A. D is sitting to the immediate right of B. Who is sitting to the immediate left of C?

- Ans
- ☒ 1. E
 - ☒ 2. B
 - ☒ 3. A
 - ☒ 4. F

Q.2 Select the Venn diagram that best illustrates the relationship between the following classes.
Shoe, Jacket, Bow

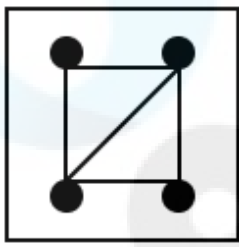
- Ans
- ☒ 1. 
 - ☒ 2. 
 - ☒ 3. 
 - ☒ 4. 

Q.3 Select the correct mirror image of the given figure when the mirror is placed at MN as shown below.

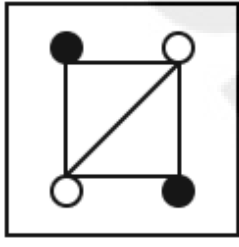


Ans

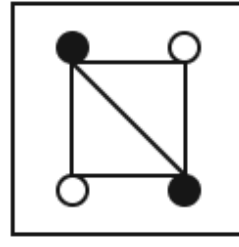
✗ 1.



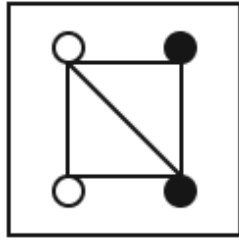
✗ 2.



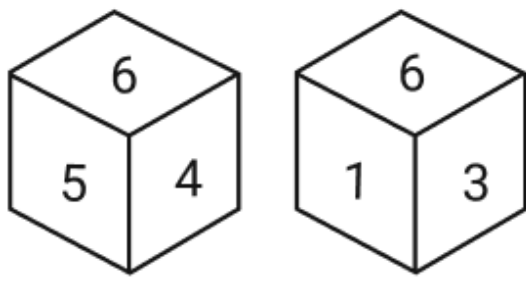
✓ 3.



✗ 4.



Q.4 Two different positions of the same dice are given below. Which is the number on the face opposite to the face containing 2?

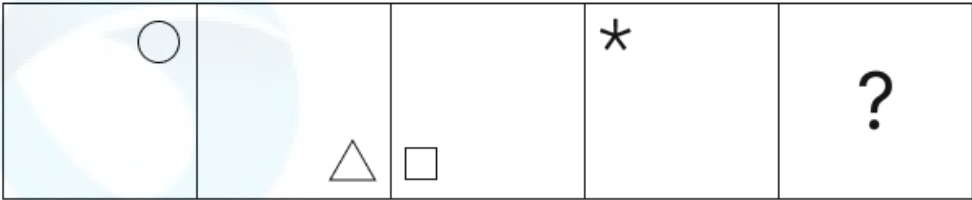


- Ans
- ✗ 1. 3
 - ✗ 2. 1
 - ✓ 3. 6
 - ✗ 4. 4

Q.5 In a certain code language, 'do the math' is coded as 'ab cd ef' and 'math is fun' is coded as 'ef gh ij'. How is 'math' coded in the given language?

- Ans
- ✗ 1. ab
 - ✗ 2. gh
 - ✓ 3. ef
 - ✗ 4. cd

Q.6 Identify the figure given in the options, which when put in place of the question mark (?) will logically complete the series.

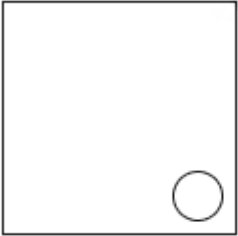


Ans

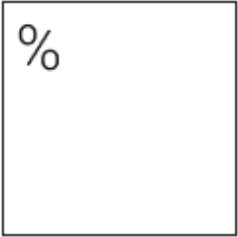
✓ 1.




✗ 2.



✗ 3.



✗ 4.



Q.7 What will come in the place of the question mark '?' in the following equation, if '÷' and 'x' are interchanged and '+' and '-' are interchanged?

$69 - 2 \div 7 + 35 \times 7 = ?$

- Ans
- ✓ 1. 78
 - ✗ 2. 79
 - ✗ 3. 77
 - ✗ 4. 80

Q.8	<p>PQTU is related to LMPQ in a certain way based on the English alphabetical order. In the same way, EHLN is related to ADHJ. To which of the given options is FMRW related, following the same logic?</p> <p>Ans <input checked="" type="checkbox"/> 1. JQVA</p> <p><input checked="" type="checkbox"/> 2. BINS</p> <p><input checked="" type="checkbox"/> 3. CHMR</p> <p><input checked="" type="checkbox"/> 4. DKPU</p>
Q.9	<p>G, H, I, J, K, L and M are sitting around a circular table, facing the centre of the table (but not necessarily in the same order) .</p> <p>Only one person sits between M and L when counted from the right of M. Only one person sits between L and I. Only one person sits between M and H. Only two people sit between K and I. Only one person sits between J and H.</p> <p>Who sits to the immediate right and left of G, respectively?</p> <p>Ans <input checked="" type="checkbox"/> 1. M and H</p> <p><input checked="" type="checkbox"/> 2. I and M</p> <p><input checked="" type="checkbox"/> 3. M and I</p> <p><input checked="" type="checkbox"/> 4. H and M</p>
Q.10	<p>In a certain code language,</p> <p>'A + B' means 'A is the father of B',</p> <p>'A - B' means 'A is the wife of B',</p> <p>'A x B' means 'A is the brother of B' and</p> <p>'A ÷ B' means 'A is the daughter of B'.</p> <p>How is F related to C if 'C - D x E ÷ F + G'?</p> <p>Ans <input checked="" type="checkbox"/> 1. Husband's father</p> <p><input checked="" type="checkbox"/> 2. Brother's son</p> <p><input checked="" type="checkbox"/> 3. Daughter's daughter</p> <p><input checked="" type="checkbox"/> 4. Mother's father</p>
Q.11	<p>What should come in place of the question mark (?) in the given series?</p> <p>410 408 404 398 ? 380</p> <p>Ans <input checked="" type="checkbox"/> 1. 386</p> <p><input checked="" type="checkbox"/> 2. 388</p> <p><input checked="" type="checkbox"/> 3. 392</p> <p><input checked="" type="checkbox"/> 4. 390</p>
Q.12	<p>The position(s) of how many letters will remain unchanged if each of the letters in the word IDENTITY is arranged in reverse English alphabetical order?</p> <p>Ans <input checked="" type="checkbox"/> 1. Four</p> <p><input checked="" type="checkbox"/> 2. Two</p> <p><input checked="" type="checkbox"/> 3. Three</p> <p><input checked="" type="checkbox"/> 4. One</p>
Q.13	<p>Select the option that represents the letters that, when sequentially placed from left to right in the blanks below, will complete the letter series.</p> <p>_ _ L M _ G _ L _ D _ P L _</p> <p>Ans <input checked="" type="checkbox"/> 1. PMGDPDM</p> <p><input checked="" type="checkbox"/> 2. GPDPMGM</p> <p><input checked="" type="checkbox"/> 3. MGGDPPM</p> <p><input checked="" type="checkbox"/> 4. DPNPDMG</p>

Q.14 In a certain code language, 'DENS' is coded as '8976' and 'SENT' is coded as '6739'. What is the code for 'T' in the given code language?

- Ans**
- ☒ 1. 9
 - ☒ 2. 6
 - ☒ 3. 7
 - ☒ 4. 3

Q.15 Read the given statements and conclusions carefully. Assuming that the information given in the statements is true, even if it appears to be at variance with commonly known facts, decide which of the given conclusions logically follow(s) from the statements.
Statements:
All pants are trousers.
No pant is a shirt.
All shirts are coats.
Conclusions:
(I): No coat is a trouser.
(II): Some coats are pants.

- Ans**
- ☒ 1. Only conclusion (I) follows.
 - ☒ 2. Only conclusion (II) follows.
 - ☒ 3. Neither conclusion (I) nor (II) follows.
 - ☒ 4. Both conclusions (I) and (II) follow.

Q.16 Based on the English alphabetical order, three of the following four letter-clusters are alike in a certain way and thus form a group. Which is the one that DOES NOT belong to that group?

(Note: The odd one out is not based on the number of consonants/vowels or their position in the letter-cluster.)

- Ans**
- ☒ 1. LMJ
 - ☒ 2. ONL
 - ☒ 3. EFC
 - ☒ 4. FGD

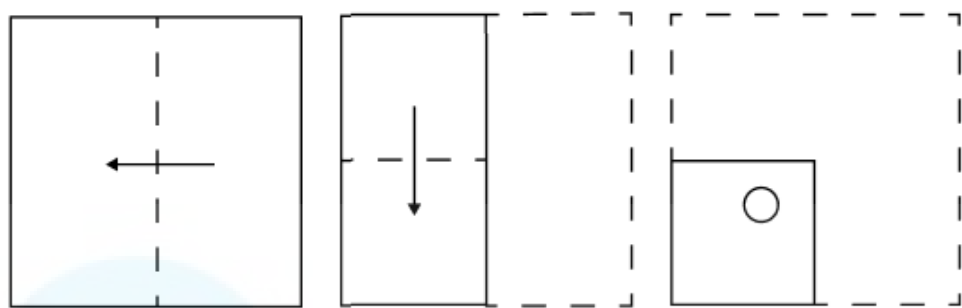
Q.17 OQUT is related to QSWV in a certain way based on the English alphabetical order. In the same way, IKON is related to KMQP. To which of the given options is ZBFE related, following the same logic?

- Ans**
- ☒ 1. BDHG
 - ☒ 2. BCGG
 - ☒ 3. BDGG
 - ☒ 4. BEGP

Q.18 What should come in place of the question mark (?) in the given series?
11, 19, 27, 35, 43, ?

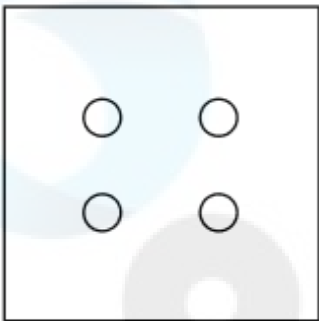
- Ans**
- ☒ 1. 53
 - ☒ 2. 50
 - ☒ 3. 52
 - ☒ 4. 51

Q.19 A paper is folded and cut as shown below. How will it appear when unfolded?




Ans

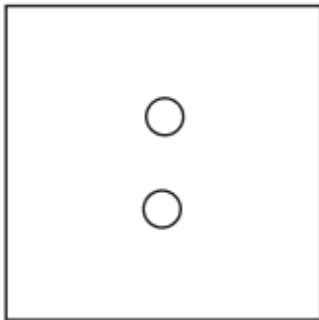
✓ 1.



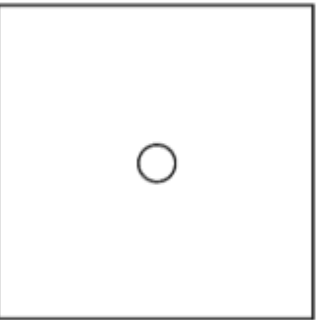
✗ 2.



✗ 3.



✗ 4.



Q.20 What should come in place of the question mark (?) in the given series based on the English alphabetical order?

RQP, LKJ, FED, ? , TSR

- Ans
- ✓ 1. ZYX
 - ✗ 2. YXZ
 - ✗ 3. XYZ
 - ✗ 4. ABC

Q.1	Which group 17 element gets its name for being a yellow-green dense gas with a choking smell?
Ans	<div><div><input checked="" type="checkbox"/></div>1. Chlorine</div> <div><div><input type="checkbox"/></div>2. Argon</div> <div><div><input type="checkbox"/></div>3. Helium</div> <div><div><input type="checkbox"/></div>4. Krypton</div>
Q.2	Bir village of Himachal Pradesh hosted which sporting event for the first time in 2015?
Ans	<div><div><input type="checkbox"/></div>1. Jet Ski World Cup</div> <div><div><input checked="" type="checkbox"/></div>2. Paragliding World Cup</div> <div><div><input type="checkbox"/></div>3. HSBC World Rugby Sevens Series</div> <div><div><input type="checkbox"/></div>4. World Rowing Championships</div>
Q.3	Who is the cabinet minister of the Union Ministry of Steel as of September 2024?
Ans	<div><div><input type="checkbox"/></div>1. Amit Shah</div> <div><div><input checked="" type="checkbox"/></div>2. HD Kumaraswamy</div> <div><div><input type="checkbox"/></div>3. Manohar Lal Khattar</div> <div><div><input type="checkbox"/></div>4. Nitin Jairam Gadkari</div>
Q.4	Name the singer who rose to prominence after recording the song 'Ishq wala love', which was released in the year 2012.
Ans	<div><div><input type="checkbox"/></div>1. Alka Yagnik</div> <div><div><input checked="" type="checkbox"/></div>2. Neeti Mohan</div> <div><div><input type="checkbox"/></div>3. Sunidhi Chauhan</div> <div><div><input type="checkbox"/></div>4. Jasleen Royal</div>
Q.5	According to Census of India 2011, which of union territory has the largest Jain population?
Ans	<div><div><input type="checkbox"/></div>1. Daman and Diu</div> <div><div><input checked="" type="checkbox"/></div>2. Delhi</div> <div><div><input type="checkbox"/></div>3. Puducherry</div> <div><div><input type="checkbox"/></div>4. Lakshadweep</div>
Q.6	Which of the following Articles of the Indian Constitution provides for the original Jurisdiction of the supreme court over Centre-State and Inter-State disputes?
Ans	<div><div><input type="checkbox"/></div>1. Article 130</div> <div><div><input type="checkbox"/></div>2. Article 135</div> <div><div><input checked="" type="checkbox"/></div>3. Article 131</div> <div><div><input type="checkbox"/></div>4. Article 134</div>
Q.7	Which Five-Year Plan introduced the concept of 'family planning' as a significant objective?
Ans	<div><div><input type="checkbox"/></div>1. Second Plan</div> <div><div><input type="checkbox"/></div>2. Seventh Plan</div> <div><div><input type="checkbox"/></div>3. First Plan</div> <div><div><input checked="" type="checkbox"/></div>4. Fourth Plan</div>

Q.8	Which of the following is NOT correctly matched? Nucleus - Storage of genetic information Ribosome - Protein synthesis Lysosome - Suicidal bags Mitochondria - Lipid metabolism
Ans	<div><div><div>✖</div><div>1. Nucleus - Storage of genetic information</div></div><div><div>✖</div><div>2. Lysosome - Suicidal bags</div></div><div><div>✖</div><div>3. Ribosome - Protein synthesis</div></div><div><div>✔</div><div>4. Mitochondria - Lipid metabolism</div></div></div>
Q.9	The Constitution (Scheduled Tribes) Order (Amendment) Bill, 2024 is intended to add which of the following scheduled tribes to the list of Scheduled Tribes in Andhra Pradesh?
Ans	<div><div><div>✖</div><div>1. Lalbegi</div></div><div><div>✖</div><div>2. Malkana</div></div><div><div>✔</div><div>3. Khond Porja</div></div><div><div>✖</div><div>4. Rukhi</div></div></div>
Q.10	Which of the following sites is linked to the Indus Valley Civilisation?
Ans	<div><div><div>✖</div><div>1. Sanchi</div></div><div><div>✔</div><div>2. Mohenjo-Daro</div></div><div><div>✖</div><div>3. Ajanta</div></div><div><div>✖</div><div>4. Bhimbetka</div></div></div>
Q.11	'Abhinaya Darpana' by Nandikesvara is one of the main sources of textual material for the study of the technique and grammar of body movement in the _____ dance.
Ans	<div><div><div>✖</div><div>1. Odissi</div></div><div><div>✖</div><div>2. Manipuri</div></div><div><div>✖</div><div>3. Kathak</div></div><div><div>✔</div><div>4. Bharatanatyam</div></div></div>
Q.12	Who is known as the 'Father of the Green Revolution' in India?
Ans	<div><div><div>✖</div><div>1. Norman Borlaug</div></div><div><div>✖</div><div>2. Jawaharlal Nehru</div></div><div><div>✖</div><div>3. Verghese Kurien</div></div><div><div>✔</div><div>4. MS Swaminathan</div></div></div>
Q.13	Which revolutionary leader attempted to assassinate Lord Hardinge?
Ans	<div><div><div>✖</div><div>1. Khudiram Bose</div></div><div><div>✖</div><div>2. Chandra Shekhar Azad</div></div><div><div>✖</div><div>3. Bhagat Singh</div></div><div><div>✔</div><div>4. Rash Behari Bose</div></div></div>
Q.14	Which of the following is NOT an aim of the Microfinance institutions in India?
Ans	<div><div><div>✖</div><div>1. Promoting women empowerment</div></div><div><div>✔</div><div>2. Decreasing the household income</div></div><div><div>✖</div><div>3. Achieving financial self-sufficiency</div></div><div><div>✖</div><div>4. Promoting socio-economic development</div></div></div>

Q.15	Kathak dancer Birju Maharaj received India's second highest civilian honour, the Padma Vibhushan, in which year?
Ans	<div><div><div>✖</div><div>1. 1971</div></div><div><div>✖</div><div>2. 1976</div></div><div><div>✔</div><div>3. 1986</div></div><div><div>✖</div><div>4. 1996</div></div></div>
Q.16	Which of the following is the local name of Dussehra festival celebrated in the state of Himachal Pradesh?
Ans	<div><div><div>✖</div><div>1. Bastar Dussehra</div></div><div><div>✖</div><div>2. Madikeri Dussehra</div></div><div><div>✖</div><div>3. Kota Dussehra</div></div><div><div>✔</div><div>4. Kullu Dussehra</div></div></div>
Q.17	Which Article of the Indian Constitution permits the State to make special provisions for women and children?
Ans	<div><div><div>✖</div><div>1. Article 21(5)</div></div><div><div>✖</div><div>2. Article 19</div></div><div><div>✔</div><div>3. Article 15(3)</div></div><div><div>✖</div><div>4. Article 14</div></div></div>
Q.18	Garib Kalyan Rojgar Abhiyan was launched by whom in 2020?
Ans	<div><div><div>✖</div><div>1. Governor of RBI</div></div><div><div>✔</div><div>2. Prime Minister of India</div></div><div><div>✖</div><div>3. Finance Minister of India</div></div><div><div>✖</div><div>4. Home Minister of India</div></div></div>
Q.19	The asthenosphere is a mechanically weak layer beneath which part of Earth? It is characterised by low seismic wave velocities and high attenuation.
Ans	<div><div><div>✖</div><div>1. Exosphere</div></div><div><div>✖</div><div>2. Ionosphere</div></div><div><div>✔</div><div>3. Lithosphere</div></div><div><div>✖</div><div>4. Troposphere</div></div></div>
Q.20	Which team has won the Syed Mushtaq Ali Trophy the maximum number of times as of 2023?
Ans	<div><div><div>✖</div><div>1. Jharkhand</div></div><div><div>✔</div><div>2. Tamil Nadu</div></div><div><div>✖</div><div>3. Punjab</div></div><div><div>✖</div><div>4. Vidarbha</div></div></div>

Section : Part-C-Elementary Mathematics	
Q.1	The price of fuel decreases by 20%, 35% and 20% in three successive months, but increases by 50% in the fourth month. What is the percentage increase/decrease in the price of fuel in the fourth month as compared to its original price?
Ans	<div><div><div>✔</div><div>1. Decreases by 37.6%</div></div><div><div>✖</div><div>2. Increases by 39.74%</div></div><div><div>✖</div><div>3. Decreases by 40.94%</div></div><div><div>✖</div><div>4. Increases by 36.35%</div></div></div>

Q.2	Two trains having lengths of 370 m and 330 m are running at speeds of 90 km/h and 150 km/h, respectively, in the same direction. The time taken (in minutes) by the faster train, coming from behind, to completely cross the other train is:
Ans	<div><div><div>✖</div><div>1. 2</div></div><div><div>✖</div><div>2. 1.2</div></div><div><div>✖</div><div>3. 2.5</div></div><div><div>✔</div><div>4. 0.7</div></div></div>
Q.3	Evaluate: $(-9) - (-60) \div (-15) + (-4) \times 9$
Ans	<div><div><div>✔</div><div>1. -49</div></div><div><div>✖</div><div>2. -51</div></div><div><div>✖</div><div>3. -48</div></div><div><div>✖</div><div>4. -52</div></div></div>
Q.4	The greatest number, which divides 2340 and 1551 to leave 40 and 33 respectively as remainders, is:
Ans	<div><div><div>✖</div><div>1. 48</div></div><div><div>✖</div><div>2. 28</div></div><div><div>✖</div><div>3. 56</div></div><div><div>✔</div><div>4. 46</div></div></div>
Q.5	The radius of a right circular cone is 3.5 cm and slant height is 0.21 m, then what is its lateral surface area? (Use $\pi = \frac{22}{7}$)
Ans	<div><div><div>✔</div><div>1. 231 cm²</div></div><div><div>✖</div><div>2. 241 cm²</div></div><div><div>✖</div><div>3. 221 cm²</div></div><div><div>✖</div><div>4. 251 cm²</div></div></div>
Q.6	A man sold an article for ₹216, there by gaining 12.5%. The cost of the article (in ₹) was:
Ans	<div><div><div>✖</div><div>1. 189</div></div><div><div>✖</div><div>2. 243</div></div><div><div>✖</div><div>3. 246</div></div><div><div>✔</div><div>4. 192</div></div></div>
Q.7	Amit invests a sum of ₹5400 and Gopal invests a sum of ₹9400 at the same rate of simple interest per annum. If, at the end of 5 years, Gopal gets ₹600 more interest than Amit, then find the rate of interest per annum (in percentage).
Ans	<div><div><div>✔</div><div>1. 3</div></div><div><div>✖</div><div>2. 4</div></div><div><div>✖</div><div>3. 2</div></div><div><div>✖</div><div>4. 5</div></div></div>
Q.8	Evaluate: $(-9) - (-60) \div (-15) + (-4) \times 7$
Ans	<div><div><div>✖</div><div>1. -43</div></div><div><div>✖</div><div>2. -44</div></div><div><div>✔</div><div>3. -41</div></div><div><div>✖</div><div>4. -40</div></div></div>

Q.9	The average marks of the first 12 students in a class was 33, and the average marks of the next 8 students of the class was 45. What is the average marks of the class? (correct to one decimal place)
Ans	<div><div><div>✖</div><div>1. 45.6</div></div><div><div>✖</div><div>2. 46.5</div></div><div><div>✔</div><div>3. 37.8</div></div><div><div>✖</div><div>4. 38.7</div></div></div>
Q.10	The average weight of Mohan, Mohammad and Ashish is 45 kg. If the average weight of Mohan and Mohammad be 43 kg and that of Mohammad and Ashish be 46 kg, then the weight of Mohammad (in kg) is:
Ans	<div><div><div>✖</div><div>1. 53</div></div><div><div>✖</div><div>2. 63</div></div><div><div>✔</div><div>3. 43</div></div><div><div>✖</div><div>4. 58</div></div></div>
Q.11	Govind invested some money in HDFC at 4% per annum rate of interest. What would be the corresponding simple interest (in ₹) if after 2 years, Govind got ₹280.5 as compound interest, considering annual compounding?
Ans	<div><div><div>✖</div><div>1. 270</div></div><div><div>✖</div><div>2. 290</div></div><div><div>✖</div><div>3. 285</div></div><div><div>✔</div><div>4. 275</div></div></div>
Q.12	400 pears were bought at ₹1250 per hundred and were sold at a profit of ₹900. Find the selling price (in ₹) per dozen of pears.
Ans	<div><div><div>✖</div><div>1. 192</div></div><div><div>✔</div><div>2. 177</div></div><div><div>✖</div><div>3. 187</div></div><div><div>✖</div><div>4. 167</div></div></div>
Q.13	A man goes to Jaipur from Surat at a speed of 20km/hr and returns to Surat at speed of 30km/hr, through same route. What is his average speed (in km/hr) of the entire journey?
Ans	<div><div><div>✖</div><div>1. 26</div></div><div><div>✔</div><div>2. 24</div></div><div><div>✖</div><div>3. 30</div></div><div><div>✖</div><div>4. 19</div></div></div>
Q.14	The marked price of an article is ₹3,500. If the selling price is ₹2,800, then the discount percent is:
Ans	<div><div><div>✔</div><div>1. 20%</div></div><div><div>✖</div><div>2. 17.9%</div></div><div><div>✖</div><div>3. 18.5%</div></div><div><div>✖</div><div>4. 15%</div></div></div>
Q.15	X can do a job in 20 days, Y in 30 days and Z in 36 days. Y and Z begin the work but have to leave after 5 days. How many complete number of days will X take to finish the remaining job?
Ans	<div><div><div>✔</div><div>1. 14</div></div><div><div>✖</div><div>2. 12</div></div><div><div>✖</div><div>3. 15</div></div><div><div>✖</div><div>4. 13</div></div></div>

Q.16	The ratio of two numbers is 16 : 23. If the difference between the numbers is 224, what is the smaller number?
Ans	<div>✗ 1. 425</div> <div>✗ 2. 412</div> <div>✗ 3. 325</div> <div>✓ 4. 512</div>
Q.17	x varies inversely to the square of y. Given that y = 5 when x = 6, find the value of x when y = 4.
Ans	<div>✗ 1. 9.175</div> <div>✗ 2. 9.835</div> <div>✓ 3. 9.375</div> <div>✗ 4. 9.925</div>
Q.18	Find the value of $\left[(49 \div 7) \times \left\{ \frac{57}{3} + \frac{19}{7} \times (9 - 2) \right\} \right]$
Ans	<div>✗ 1. 259</div> <div>✓ 2. 266</div> <div>✗ 3. 276</div> <div>✗ 4. 270</div>
Q.19	The price of sugar increased by 22.5%. Anita wants to keep her expenditure on sugar same as before. By what percentage must she reduce her consumption of sugar (correct to two place of decimals)?
Ans	<div>✗ 1. 19.24%</div> <div>✓ 2. 18.37%</div> <div>✗ 3. 18.80%</div> <div>✗ 4. 17.12%</div>
Q.20	Shan has ₹1218 with him. He divided it amongst his sons Piyush and Manoj and asked them to invest it at 10% rate of interest compounded annually. It was seen that Piyush and Manoj got same amount after 18 and 19 years respectively. How much (in ₹) did Shan give to Manoj?
Ans	<div>✗ 1. 638</div> <div>✗ 2. 430</div> <div>✗ 3. 738</div> <div>✓ 4. 580</div>

Section : Part-D-English

Q.1	Identify the INCORRECTLY spelt word in the given sentence.
	Her aesthetic sense and meticolos attention to detail conferred an unparalleled distinction to her work.
Ans	<div>✓ 1. meticolos</div> <div>✗ 2. aesthetic</div> <div>✗ 3. unparalleled</div> <div>✗ 4. conferred</div>

Q.2	Select the most appropriate ANTONYM of the given word. Hasten Ans <input checked="" type="checkbox"/> 1. Hold <input type="checkbox"/> 2. Serious <input type="checkbox"/> 3. Urge <input type="checkbox"/> 4. Encourage
Q.3	Select the most appropriate option that can substitute the highlighted word segment in the given sentence. If the sentence is grammatically correct, select 'No correction'. Neha is writing a letter when I called her. Ans <input type="checkbox"/> 1. writes <input checked="" type="checkbox"/> 2. was writing <input type="checkbox"/> 3. No correction <input type="checkbox"/> 4. is being written
Q.4	Select the most appropriate option that can substitute the underlined words in the given sentence. She said she would join us later, <u>but I don't knew</u> if she will make it on time. Ans <input type="checkbox"/> 1. but I didn't known <input type="checkbox"/> 2. but I won't be knowing <input type="checkbox"/> 3. but I doesn't know <input checked="" type="checkbox"/> 4. but I don't know
Q.5	Select the most appropriate option to substitute the underlined segment in the given sentence. "Camila helps her mother in cooking dinner, <u>isn't she?</u> " asked Veronica. Ans <input type="checkbox"/> 1. don't she <input type="checkbox"/> 2. wasn't she <input checked="" type="checkbox"/> 3. doesn't she <input type="checkbox"/> 4. hasn't she
Q.6	Select the word that best completes the given sentence. Determine the collocation through the sentence. Vichu spent _____ time with his wife in Goa for about three days. Ans <input type="checkbox"/> 1. wise <input type="checkbox"/> 2. costly <input checked="" type="checkbox"/> 3. quality <input type="checkbox"/> 4. brave
Q.7	Parts of the following sentence have been given as options. Select the option that contains an error. The constitutional lawyer argued persuasively and with surgical precision, dismantling the opposition's case piece by logic piece. Ans <input type="checkbox"/> 1. dismantling the opposition's case <input type="checkbox"/> 2. The constitutional lawyer argued persuasively <input checked="" type="checkbox"/> 3. piece by logic piece <input type="checkbox"/> 4. and with surgical precision,

Q.8	Select the most appropriate synonym of the given word.
Grandeur	
Ans	<div><div><input type="checkbox"/></div>1. Dominance</div> <div><div><input type="checkbox"/></div>2. Integrity</div> <div><div><input type="checkbox"/></div>3. Reality</div> <div><div><input checked="" type="checkbox"/></div>4. Magnificence</div>

Q.14 Select the most appropriate synonym of the word 'engrossing'to fill in the blank.

The historical novel was quite _____, transporting readers to a bygone era.

- Ans
- ☒ 1. involving
 - ☐ 2. malodorous
 - ☐ 3. rancid
 - ☐ 4. musty

Q.15 Select the most appropriate meaning of the given word.

Frugal

- Ans
- ☐ 1. Dishonest and deceitful
 - ☐ 2. Extravagant and lavish
 - ☐ 3. Impulsive and reckless
 - ☒ 4. Careful with spending

Comprehension:

In the following passage, some words have been deleted. Read the passage carefully and select the most appropriate option to fill in each blank.

The National Family Health Survey (NFHS) mentioned in its report how effectively India has used its newly created wealth to alter a dismal record of nutritional deprivation, ill-health and lost potential (1)_____ its citizens, particularly women and children. Given the steady growth in real per capita GDP since the 1980s, and the progress made since Independence in overcoming severe undernourishment, enlightened policy approaches could have brought about a giant leap from 1992-93, when the first NFHS was conducted, (2)_____ that no child or woman was left behind in the quest for health for all. Evidently, the Indian state has not viewed the situation as constituting a national crisis, even at the height of a prosperous phase of economic growth when a decade ago 39% of children under the age of five remained underweight. It comes as no surprise, therefore, that this failure to assume responsibility for child nutrition has left 34% of children in that age group underweight today. There is also a lot of evidence to show that the (3)_____ sections of India's children have low weight even at birth due to the general (4)_____ of women's nutrition and well-being. It is imperative that the coming data lead to the charting of a new policy course that makes (5)_____ to nutrition and health a right for all.

SubQuestion No : 16

Q.16 Select the most appropriate option to fill in blank number 1.

- Ans
- ☐ 1. from
 - ☐ 2. by
 - ☒ 3. among
 - ☐ 4. to

Comprehension:

In the following passage, some words have been deleted. Read the passage carefully and select the most appropriate option to fill in each blank.

The National Family Health Survey (NFHS) mentioned in its report how effectively India has used its newly created wealth to alter a dismal record of nutritional deprivation, ill-health and lost potential (1)_____ its citizens, particularly women and children. Given the steady growth in real per capita GDP since the 1980s, and the progress made since Independence in overcoming severe undernourishment, enlightened policy approaches could have brought about a giant leap from 1992-93, when the first NFHS was conducted, (2)_____ that no child or woman was left behind in the quest for health for all. Evidently, the Indian state has not viewed the situation as constituting a national crisis, even at the height of a prosperous phase of economic growth when a decade ago 39% of children under the age of five remained underweight. It comes as no surprise, therefore, that this failure to assume responsibility for child nutrition has left 34% of children in that age group underweight today. There is also a lot of evidence to show that the (3)_____ sections of India's children have low weight even at birth due to the general (4)_____ of women's nutrition and well-being. It is imperative that the coming data lead to the charting of a new policy course that makes (5)_____ to nutrition and health a right for all.

SubQuestion No : 17

Q.17 Select the most appropriate option to fill in blank number 2.

- Ans
- ☐ 1. avoiding
 - ☐ 2. searching
 - ☒ 3. ensuring
 - ☐ 4. suggesting

Comprehension:

In the following passage, some words have been deleted. Read the passage carefully and select the most appropriate option to fill in each blank.

The National Family Health Survey (NFHS) mentioned in its report how effectively India has used its newly created wealth to alter a dismal record of nutritional deprivation, ill-health and lost potential (1)_____ its citizens, particularly women and children. Given the steady growth in real per capita GDP since the 1980s, and the progress made since Independence in overcoming severe undernourishment, enlightened policy approaches could have brought about a giant leap from 1992-93, when the first NFHS was conducted, (2)_____ that no child or woman was left behind in the quest for health for all. Evidently, the Indian state has not viewed the situation as constituting a national crisis, even at the height of a prosperous phase of economic growth when a decade ago 39% of children under the age of five remained underweight. It comes as no surprise, therefore, that this failure to assume responsibility for child nutrition has left 34% of children in that age group underweight today. There is also a lot of evidence to show that the (3)_____ sections of India's children have low weight even at birth due to the general (4)_____ of women's nutrition and well-being. It is imperative that the coming data lead to the charting of a new policy course that makes (5)_____ to nutrition and health a right for all.

SubQuestion No : 18

Q.18 Select the most appropriate option to fill in blank number 3.

- Ans**
- ☒ 1. gifted
 - ☒ 2. conjured
 - ☒ 3. deprived
 - ☒ 4. benefitted

Comprehension:

In the following passage, some words have been deleted. Read the passage carefully and select the most appropriate option to fill in each blank.

The National Family Health Survey (NFHS) mentioned in its report how effectively India has used its newly created wealth to alter a dismal record of nutritional deprivation, ill-health and lost potential (1)_____ its citizens, particularly women and children. Given the steady growth in real per capita GDP since the 1980s, and the progress made since Independence in overcoming severe undernourishment, enlightened policy approaches could have brought about a giant leap from 1992-93, when the first NFHS was conducted, (2)_____ that no child or woman was left behind in the quest for health for all. Evidently, the Indian state has not viewed the situation as constituting a national crisis, even at the height of a prosperous phase of economic growth when a decade ago 39% of children under the age of five remained underweight. It comes as no surprise, therefore, that this failure to assume responsibility for child nutrition has left 34% of children in that age group underweight today. There is also a lot of evidence to show that the (3)_____ sections of India's children have low weight even at birth due to the general (4)_____ of women's nutrition and well-being. It is imperative that the coming data lead to the charting of a new policy course that makes (5)_____ to nutrition and health a right for all.

SubQuestion No : 19

Q.19 Select the most appropriate option to fill in blank number 4.

- Ans**
- ☒ 1. accept
 - ☒ 2. approve
 - ☒ 3. manage
 - ☒ 4. neglect

Comprehension:

In the following passage, some words have been deleted. Read the passage carefully and select the most appropriate option to fill in each blank.

The National Family Health Survey (NFHS) mentioned in its report how effectively India has used its newly created wealth to alter a dismal record of nutritional deprivation, ill-health and lost potential (1)_____ its citizens, particularly women and children. Given the steady growth in real per capita GDP since the 1980s, and the progress made since Independence in overcoming severe undernourishment, enlightened policy approaches could have brought about a giant leap from 1992-93, when the first NFHS was conducted, (2)_____ that no child or woman was left behind in the quest for health for all. Evidently, the Indian state has not viewed the situation as constituting a national crisis, even at the height of a prosperous phase of economic growth when a decade ago 39% of children under the age of five remained underweight. It comes as no surprise, therefore, that this failure to assume responsibility for child nutrition has left 34% of children in that age group underweight today. There is also a lot of evidence to show that the (3)_____ sections of India's children have low weight even at birth due to the general (4)_____ of women's nutrition and well-being. It is imperative that the coming data lead to the charting of a new policy course that makes (5)_____ to nutrition and health a right for all.

SubQuestion No : 20

Q.20 Select the most appropriate option to fill in blank number 5.

- Ans**
- ☒ 1. access
 - ☒ 2. primary
 - ☒ 3. terminate
 - ☒ 4. required

Q.1	निम्नलिखित वाक्य को ध्यानपूर्वक पढ़ें और बताएं कि चिन्हित वाक्यांश में किस प्रकार की त्रुटि है? सभी धारावाहिक देख रहे थे कि तभी <u>सविता आई और कहा कि सविता</u> भी धारावाहिक देखेगी।
Ans	<div><div><input checked="" type="checkbox"/></div>1. सर्वनाम संबंधी अशुद्धि</div> <div><div><input type="checkbox"/></div>2. अव्यय</div> <div><div><input type="checkbox"/></div>3. विशेषण</div> <div><div><input type="checkbox"/></div>4. वचन संबंधी अशुद्धि</div>
Q.2	अंशुमाली _____ , उपर्युक्त वाक्य में रिक्त स्थान का उपयुक्त विकल्प निम्न में से क्या होगा?
Ans	<div><div><input type="checkbox"/></div>1. से अभिप्राय है अंशु का मित्र</div> <div><div><input checked="" type="checkbox"/></div>2. से अभिप्राय है अंशु का स्वामी</div> <div><div><input type="checkbox"/></div>3. से अभिप्राय है अंशु का पुत्र</div> <div><div><input type="checkbox"/></div>4. से अभिप्राय है अंशु का माली</div>
Q.3	‘भ्रांत’ के लिए कौन-सा विलोम सही है?
Ans	<div><div><input type="checkbox"/></div>1. भ्रांतिपूर्ण</div> <div><div><input type="checkbox"/></div>2. अभ्रांत</div> <div><div><input type="checkbox"/></div>3. संभ्रांत</div> <div><div><input checked="" type="checkbox"/></div>4. निभ्रांत</div>
Q.4	‘कृपण’ का विलोम शब्द नीचे दिए विकल्पों में से चुनिए-
Ans	<div><div><input type="checkbox"/></div>1. क्रय</div> <div><div><input type="checkbox"/></div>2. गमन</div> <div><div><input type="checkbox"/></div>3. विक्रय</div> <div><div><input checked="" type="checkbox"/></div>4. दाता</div>
Q.5	‘कोयल की कूक मधुर लगती है और शंख -ध्वनि पावन होती है’। बिना अर्थ में परिवर्तन लाये, दोनों रेखांकित शब्दों को किसी एक शब्द से प्रतिस्थापित किया जा सकता है?
Ans	<div><div><input checked="" type="checkbox"/></div>1. सारंग</div> <div><div><input type="checkbox"/></div>2. मराल</div> <div><div><input type="checkbox"/></div>3. कुरंग</div> <div><div><input type="checkbox"/></div>4. हंसक</div>
Q.6	निम्नलिखित वाक्यांश हेतु सार्थक शब्द की पहचान करें। जो धन को व्यर्थ ही खर्च करता हो
Ans	<div><div><input type="checkbox"/></div>1. व्यय</div> <div><div><input checked="" type="checkbox"/></div>2. अपव्ययी</div> <div><div><input type="checkbox"/></div>3. महंगाई</div> <div><div><input type="checkbox"/></div>4. खर्च</div>
Q.7	निम्नलिखित वाक्य के किस भाग में त्रुटि है? इस पुस्तक का अनुवाद देवनागरी भाषा में किया गया है।
Ans	<div><div><input checked="" type="checkbox"/></div>1. देवनागरी भाषा में</div> <div><div><input type="checkbox"/></div>2. इस पुस्तक का</div> <div><div><input type="checkbox"/></div>3. किया गया है</div> <div><div><input type="checkbox"/></div>4. अनुवाद</div>

Q.8	निम्नलिखित वाक्यांश के लिए उपयुक्त सार्थक शब्द है: सेना के रहने की जगह
Ans	<div><div><div>✖</div><div>1. तबेला</div></div><div><div>✖</div><div>2. बड़ा</div></div><div><div>✖</div><div>3. दरबा</div></div><div><div>✔</div><div>4. छावनी</div></div></div>
Q.9	निम्नलिखित वाक्य में विशेषण संबंधी त्रुटि की पहचान कर वाक्य शुद्धि करें। यह सबसे सुंदरतम घड़ी है।
Ans	<div><div><div>✖</div><div>1. यह बहुत सुंदरतम घड़ी है।</div></div><div><div>✔</div><div>2. यह सबसे सुंदर घड़ी है।</div></div><div><div>✖</div><div>3. यह अत्यंत सुंदरतम घड़ी है।</div></div><div><div>✖</div><div>4. यह कितनी सुंदरतम घड़ी है।</div></div></div>
Q.10	‘अपने पाँव आप लाठी मारना’। मुहावरे के लिए रेखांकित शब्द के स्थान पर उपयुक्त शब्द होगा-
Ans	<div><div><div>✖</div><div>1. चोट</div></div><div><div>✖</div><div>2. लात</div></div><div><div>✔</div><div>3. कुल्हाड़ी</div></div><div><div>✖</div><div>4. मूसल</div></div></div>
Q.11	इस योजना में सहभागिता ऐच्छिक है और राज्य इस योजना को अपनाने या न अपनाने के लिये स्वतंत्र हैं। 'ऐच्छिक' के स्थान पर उचित वाक्यांश होगा -
Ans	<div><div><div>✖</div><div>1. दूसरों की इच्छा पर निर्भर</div></div><div><div>✖</div><div>2. अपनी इच्छा पर निर्भर नहीं</div></div><div><div>✖</div><div>3. सरकार की इच्छा पर निर्भर</div></div><div><div>✔</div><div>4. व्यक्ति की इच्छा पर निर्भर</div></div></div>
Q.12	‘अहमद को विज्ञान में _____ अंक मिले हैं।’ वाक्य के रिक्त स्थान के लिए न्यूनतम शब्द का सर्वाधिक उपयुक्त विलोम शब्द चुनिए-
Ans	<div><div><div>✖</div><div>1. उच्चतम</div></div><div><div>✔</div><div>2. अधिकतम</div></div><div><div>✖</div><div>3. सर्वोच्च</div></div><div><div>✖</div><div>4. श्रेष्ठतम</div></div></div>
Q.13	निम्न वाक्य को शुद्ध कीजिए - अपनी छाच को कोई भी खट्टा नहीं कहता है।
Ans	<div><div><div>✖</div><div>1. छाच</div></div><div><div>✖</div><div>2. चाझ</div></div><div><div>✖</div><div>3. चाछ</div></div><div><div>✔</div><div>4. छाछ</div></div></div>
Q.14	‘मेरी नानी मुझे पंचतन्त्र की _____ सुनाया करती थीं।’ रिक्त स्थान की पूर्ति तत्सम शब्द द्वारा कीजिए
Ans	<div><div><div>✔</div><div>1. कथानिका</div></div><div><div>✖</div><div>2. कहानी</div></div><div><div>✖</div><div>3. कथनिका</div></div><div><div>✖</div><div>4. कहनी</div></div></div>

Q.15 सार्थक शब्द से रिक्त स्थान भरें-
उसके माता-पिता नहीं है वह बिल्कुल _____ बालक है।

- Ans ☒ 1. अनाथ
☒ 2. धाना
☒ 3. मेढा
☒ 4. बनाथ

Comprehension:

गद्यांश के आधार पर प्रश्न का उत्तर दें।
सामाजिक समानता का अभिप्राय है कि सामाजिक क्षेत्र में जाति, धर्म, व्यवसाय, रंग आदि के आधार पर किसी प्रकार का भेद-भाव न किया जाए। सबको 1 _____ समझा जाए और सबको समान सुविधाएं दी जाए। हमारे देश में सामाजिक 2 _____ का अभाव है। जाति-प्रथा के कारण करोड़ों व्यक्ति समाज में अछूत के रूप में रहते हैं। उन्हें समाज से 3 _____ समझा जाता है और सामाजिक अधिकारों से वंचित कर दिया गया है। हमारे समाज में लड़कियों के साथ भी भेदभाव बरता जाता है। माता- पिता भी उन्हें वे सुविधाएं नहीं देते जो वे अपने 4 _____ को देते हैं। इस प्रकार की असमानता से बहुत-सी लड़कियों का शारीरिक और मानसिक विकास सुचारु रूप से नहीं हो पाता है। इससे समाज की उन्नति में 5 _____ पड़ती है। इस प्रकार की असमानता का दूर होना आवश्यक है।

SubQuestion No : 16

Q.16 रिक्त संख्या 1 के स्थान पर उपयुक्त शब्द इनमें से क्या होगा?

- Ans ☒ 1. समान
☒ 2. असमान
☒ 3. मित्रता
☒ 4. विषम

Comprehension:

गद्यांश के आधार पर प्रश्न का उत्तर दें।
सामाजिक समानता का अभिप्राय है कि सामाजिक क्षेत्र में जाति, धर्म, व्यवसाय, रंग आदि के आधार पर किसी प्रकार का भेद-भाव न किया जाए। सबको 1 _____ समझा जाए और सबको समान सुविधाएं दी जाए। हमारे देश में सामाजिक 2 _____ का अभाव है। जाति-प्रथा के कारण करोड़ों व्यक्ति समाज में अछूत के रूप में रहते हैं। उन्हें समाज से 3 _____ समझा जाता है और सामाजिक अधिकारों से वंचित कर दिया गया है। हमारे समाज में लड़कियों के साथ भी भेदभाव बरता जाता है। माता- पिता भी उन्हें वे सुविधाएं नहीं देते जो वे अपने 4 _____ को देते हैं। इस प्रकार की असमानता से बहुत-सी लड़कियों का शारीरिक और मानसिक विकास सुचारु रूप से नहीं हो पाता है। इससे समाज की उन्नति में 5 _____ पड़ती है। इस प्रकार की असमानता का दूर होना आवश्यक है।

SubQuestion No : 17

Q.17 रिक्त संख्या 2 के स्थान पर उपयुक्त शब्द इनमें से क्या होगा?

- Ans ☒ 1. समानता
☒ 2. मित्र
☒ 3. असमानता
☒ 4. दुश्मनी

Comprehension:

गद्यांश के आधार पर प्रश्न का उत्तर दें।
सामाजिक समानता का अभिप्राय है कि सामाजिक क्षेत्र में जाति, धर्म, व्यवसाय, रंग आदि के आधार पर किसी प्रकार का भेद-भाव न किया जाए। सबको 1 _____ समझा जाए और सबको समान सुविधाएं दी जाए। हमारे देश में सामाजिक 2 _____ का अभाव है। जाति-प्रथा के कारण करोड़ों व्यक्ति समाज में अछूत के रूप में रहते हैं। उन्हें समाज से 3 _____ समझा जाता है और सामाजिक अधिकारों से वंचित कर दिया गया है। हमारे समाज में लड़कियों के साथ भी भेदभाव बरता जाता है। माता- पिता भी उन्हें वे सुविधाएं नहीं देते जो वे अपने 4 _____ को देते हैं। इस प्रकार की असमानता से बहुत-सी लड़कियों का शारीरिक और मानसिक विकास सुचारु रूप से नहीं हो पाता है। इससे समाज की उन्नति में 5 _____ पड़ती है। इस प्रकार की असमानता का दूर होना आवश्यक है।

SubQuestion No : 18

Q.18 रिक्त संख्या 3 के स्थान पर उपयुक्त शब्द इनमें से क्या होगा?

- Ans ☒ 1. स्वीकृत
☒ 2. अमान्य
☒ 3. बहिष्कृत
☒ 4. सम्मानित

Comprehension:

गद्यांश के आधार पर प्रश्न का उत्तर दें।
सामाजिक समानता का अभिप्राय है कि सामाजिक क्षेत्र में जाति, धर्म, व्यवसाय, रंग आदि के आधार पर किसी प्रकार का भेद-भाव न किया जाए। सबको 1_____ समझा जाए और सबको समान सुविधाएं दी जाए। हमारे देश में सामाजिक 2_____ का अभाव है। जाति-प्रथा के कारण करोड़ों व्यक्ति समाज में अछूत के रूप में रहते हैं। उन्हें समाज से 3_____ समझा जाता है और सामाजिक अधिकारों से वंचित कर दिया गया है। हमारे समाज में लड़कियों के साथ भी भेदभाव बरता जाता है। माता- पिता भी उन्हें वे सुविधाएं नहीं देते जो वे अपने 4_____ को देते हैं। इस प्रकार की असमानता से बहुत-सी लड़कियों का शारीरिक और मानसिक विकास सुचारु रूप से नहीं हो पाता है। इससे समाज की उन्नति में 5_____ पड़ती है। इस प्रकार की असमानता का दूर होना आवश्यक है।

SubQuestion No : 19

Q.19 रिक्त संख्या 4 के स्थान पर उपयुक्त शब्द इनमें से क्या होगा?

- Ans**
- ☒ 1. लड़कों
 - ☐ 2. बहनों
 - ☐ 3. बेटियों
 - ☐ 4. दोस्तों

Comprehension:

गद्यांश के आधार पर प्रश्न का उत्तर दें।
सामाजिक समानता का अभिप्राय है कि सामाजिक क्षेत्र में जाति, धर्म, व्यवसाय, रंग आदि के आधार पर किसी प्रकार का भेद-भाव न किया जाए। सबको 1_____ समझा जाए और सबको समान सुविधाएं दी जाए। हमारे देश में सामाजिक 2_____ का अभाव है। जाति-प्रथा के कारण करोड़ों व्यक्ति समाज में अछूत के रूप में रहते हैं। उन्हें समाज से 3_____ समझा जाता है और सामाजिक अधिकारों से वंचित कर दिया गया है। हमारे समाज में लड़कियों के साथ भी भेदभाव बरता जाता है। माता- पिता भी उन्हें वे सुविधाएं नहीं देते जो वे अपने 4_____ को देते हैं। इस प्रकार की असमानता से बहुत-सी लड़कियों का शारीरिक और मानसिक विकास सुचारु रूप से नहीं हो पाता है। इससे समाज की उन्नति में 5_____ पड़ती है। इस प्रकार की असमानता का दूर होना आवश्यक है।

SubQuestion No : 20

Q.20 रिक्त संख्या 5 के स्थान पर उपयुक्त शब्द इनमें से क्या होगा?

- Ans**
- ☐ 1. दिक्कत
 - ☒ 2. बाधा
 - ☐ 3. समस्या
 - ☐ 4. सुविधा