

Constable GD in CAPFs and SSF Rifleman GD in AR and Sepoy in NCB Examination 2025

Exam Date	21/02/2025
Exam Time	9:00 AM - 10:00 AM
Subject	Constable GD Examination 2025

Section : Part-A-General Intelligence and Reasoning

Q.1

Select the combination of letters that when filled in the blanks in the same sequence will make the series logically complete.
_BFGK_HMIF_OKHL_ MJN_

Ans

✗

1. EFJRS

✗

2. CDKQT

✓

3. EDJQS

✗

4. CFKRT

Q.2

In a certain code language, 'RATE' is coded as '7532' and 'PART' is coded as '6735'. How is 'P' coded in the given language?

Ans

✗

1. 2

✓

2. 6

✗

3. 5

✗

4. 7

Q.3

A dice has its faces marked by letters A, B, C, D, E and F. Two different positions of the same dice are shown. Select the letter that will be on the face opposite to the one having C?

F

E

D

F

A

B

Ans

✗

1. E

✗

2. D

✓

3. F

✗

4. B

Q.4

What should come in place of the question mark (?) in the given series?
451 460 470 ? 493 506

Ans

✓

1. 481

✗

2. 479

✗

3. 480

✗

4. 482

Q.5

What should come in place of '?' in the given series based on the English alphabetical order?
EIK IGJ MEI QCH ?

Ans

✗

1. IUA

✗

2. UAI

✗

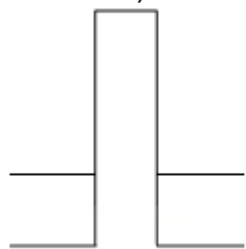
3. AUI

✓

4. UAG

Q.6	Six people, D, E, F, Q, R and S, are sitting around a circular table facing the centre (but not necessarily in the same order) . S sits to the immediate right of D. E sits second to the left of Q. Q sits to the immediate left of D. F sits third to the right of Q. How many people sit between R and F when counted from the left of F?
Ans	<div><div><input checked="" type="checkbox"/></div>1. Three</div> <div><div><input type="checkbox"/></div>2. Four</div> <div><div><input type="checkbox"/></div>3. Two</div> <div><div><input type="checkbox"/></div>4. One</div>
Q.7	NT 6 is related to QR 1 in a certain way. In the same way, FN 8 is related to IL 3. To which of the following is JL 16 related, following the same logic?
Ans	<div><div><input type="checkbox"/></div>1. MM 11</div> <div><div><input type="checkbox"/></div>2. NM 10</div> <div><div><input type="checkbox"/></div>3. LJ 10</div> <div><div><input checked="" type="checkbox"/></div>4. MJ 11</div>
Q.8	<p>Read the given statements and conclusions carefully. Assuming that the information given in the statements is true, even if it appears to be at variance with commonly known facts, decide which of the given conclusion(s) logically follow(s) from the statement(s).</p> <p>Statements: All onions are potatoes. No potato is a tomato. No potato is a corn.</p> <p>Conclusions: (I) No onion is a tomato. (II): Some corns are tomatoes.</p>
Ans	<div><div><input type="checkbox"/></div>1. Both conclusions (I) and (II) follow.</div> <div><div><input type="checkbox"/></div>2. Only conclusion (II) follows.</div> <div><div><input checked="" type="checkbox"/></div>3. Only conclusion (I) follows.</div> <div><div><input type="checkbox"/></div>4. Neither conclusion (I) nor (II) follows.</div>
Q.9	The position(s) of how many letters will remain unchanged if each of the letters in the word ACTIVITY is arranged in reverse English alphabetical order?
Ans	<div><div><input type="checkbox"/></div>1. Three</div> <div><div><input type="checkbox"/></div>2. Four</div> <div><div><input type="checkbox"/></div>3. One</div> <div><div><input checked="" type="checkbox"/></div>4. Two</div>
Q.10	<p>What should come in place of the question mark (?) in the given series?</p> <p>567 570 575 582 591 ?</p>
Ans	<div><div><input type="checkbox"/></div>1. 596</div> <div><div><input type="checkbox"/></div>2. 600</div> <div><div><input type="checkbox"/></div>3. 599</div> <div><div><input checked="" type="checkbox"/></div>4. 602</div>


Q.11 Select the option figure in which the given figure (X) is embedded as its part (rotation is NOT allowed).



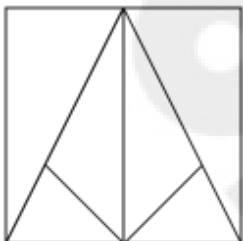
(X)

Ans

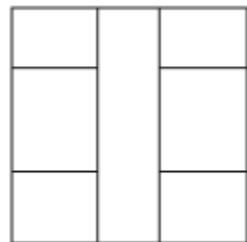
✗ 1.



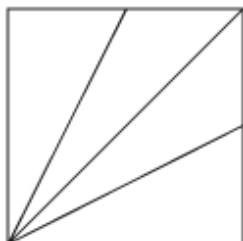
✗ 2.



✓ 3.



✗ 4.



Q.12 A, B, C, D, E, F and G are sitting around a circular table facing the centre (but not necessarily in the same order). B sits third to the right of E. E sits second to the left of G. G is to the immediate right of F. G is not an immediate neighbour of E. A sits on the immediate right of B and C sits on the immediate left of E. How many people sit between D and B when counted from the left of D?

- Ans
- ✗ 1. Two
 - ✗ 2. Three
 - ✗ 3. Four
 - ✓ 4. One

Q.13 In a certain code language, 'I eat breakfast' is coded as 'hk mr lt' and 'breakfast is healthy' is coded as 'xz hk bd'. How is 'breakfast' coded in the given language?

- Ans
- ✗ 1. ft
 - ✓ 2. hk
 - ✗ 3. xz
 - ✗ 4. mr

Q.14 Identify the figure given in the options, which when put in place of the question mark (?) will logically complete the series.

T 5	K T	M K	7 M	
Q K 9	Q M 5	U 7 T	U 9 K	?
M 7	7 9	9 5	5 T	

Ans

✗ 1.

9 7
U 5 M
T K

✗ 2.

5 9
U T 7
K M

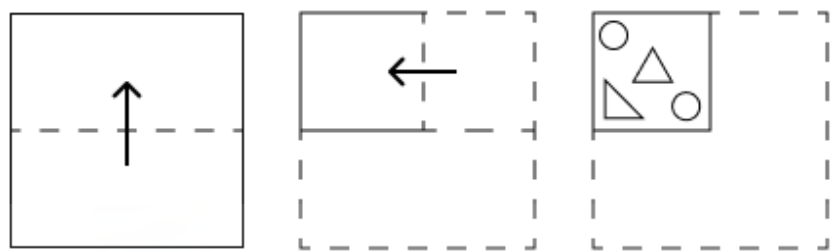
✓ 3.

9 7
Q 5 M
T K

✗ 4.


7 9
U M 5
T K

Q.15 A paper is folded and cut as shown below. How will it appear when unfolded?

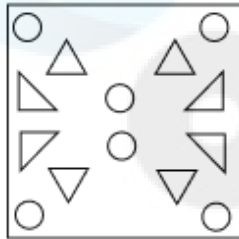


Ans

✓ 1.




✗ 2.



✗ 3.



✗ 4.



Q.16 UHAR is related to XKDU in a certain way based on the English alphabetical order. In the same way, SDWC is related to VGZF. To which of the given options is IMOS related, following the same logic?

- Ans
- ✗ 1. MOSW
 - ✗ 2. GQTU
 - ✓ 3. LPRV
 - ✗ 4. GORT

Q.17 What will come in the place of the question mark (?) in the following equation, if '+' and 'x' are interchanged and '-' and '÷' are interchanged?

$51 \div 6 + 9 \times 84 - 4 = ?$

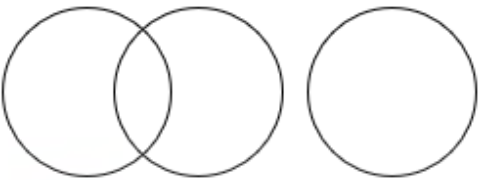
- Ans
- ✗ 1. 25
 - ✗ 2. 21
 - ✓ 3. 18
 - ✗ 4. 30

Q.18 Select the Venn diagram that best illustrates the relationship between the following classes.

Tiger, Monkey, Animals

Ans


✗ 1.




✓ 2.



✗ 3.



✗ 4.



Q.19 Based on the English alphabetical order, three of the following four letter-clusters are alike in a certain way and thus form a group. Which is the one that DOES NOT belong to that group?

(Note: The odd one out is not based on the number of consonants/vowels or their position in the letter-cluster.)

Ans

✗ 1. BZC

✗ 2. NLO

✓ 3. QPR

✗ 4. PNQ

Q.20 In a certain code language,

'A + B' means 'A is the daughter of B',
'A – B' means 'A is the brother of B',
'A × B' means 'A is the wife of B' and
'A ÷ B' means 'A is the father of B'.

Based on the above, how is P related to T if 'P + Q × R – S ÷ T'?

Ans

✗ 1. Mother's brother's daughter

✗ 2. Mother's brother's wife

✓ 3. Father's brother's daughter

✗ 4. Father's brother's wife

Section : Part-B-General Knowledge and General awareness

Q.1 Tamilisai Soundararajan was the Lieutenant Governor of which of the following union territories before resigning to contest the Lok Sabha elections in 2024?

Ans

✓ 1. Puducherry

✗ 2. Jammu and Kashmir

✗ 3. Lakshadweep

✗ 4. Ladakh

Q.2	An object is thrown upwards. At the highest point of its trajectory, its:		
Ans	<div><div>✓</div>1. potential energy is maximum</div> <div><div>✗</div>2. both kinetic and potential energy are maximum</div> <div><div>✗</div>3. kinetic energy is maximum</div> <div><div>✗</div>4. both kinetic and potential energy are zero</div>		
Q.3	Which group of people settled in northwestern India around Taxila in the 1 st century BC?		
Ans	<div><div>✓</div>1. Kushanas</div> <div><div>✗</div>2. Indo-Greeks</div> <div><div>✗</div>3. Parthians</div> <div><div>✗</div>4. Shakas</div>		
Q.4	Which Five-Year Plan's implementation was shifted to focus on the Prime Minister's 20-Point Programme during the Emergency?		
Ans	<div><div>✓</div>1. Fifth Plan</div> <div><div>✗</div>2. Fourth Plan</div> <div><div>✗</div>3. Sixth Plan</div> <div><div>✗</div>4. Third Plan</div>		
Q.5	Match the following:		
A	Citric Acid	1	Basic
B	Quicklime	2	NaCl
C	Common Salt	3	Found in lemons, limes, and oranges
D	Bleaching Powder	4	CaOCl ₂
Ans	<div><div>✗</div>1. A-1, B-3, C-2, D-4</div> <div><div>✓</div>2. A-3, B-1, C-2, D-4</div> <div><div>✗</div>3. A-3, B-1, C-4, D-2</div> <div><div>✗</div>4. A-2, B-4, C-3, D-1</div>		
Q.6	Who has been appointed as the Additional Director General (ADG) of the Indo-Tibetan Border Police (ITBP) in August 2024?		
Ans	<div><div>✓</div>1. Sanjeev Raina</div> <div><div>✗</div>2. Bhupesh Raina</div> <div><div>✗</div>3. Dheeraj Sudan</div> <div><div>✗</div>4. Dheeraj Pandey</div>		
Q.7	The Indian Independence Act of 1947 resulted in the partition of India into how many dominions?		
Ans	<div><div>✗</div>1. Three</div> <div><div>✓</div>2. Two</div> <div><div>✗</div>3. Four</div> <div><div>✗</div>4. One</div>		
Q.8	The Joint Sitting of the parliament is governed by the rules of _____.		
Ans	<div><div>✓</div>1. Lok Sabha</div> <div><div>✗</div>2. Special Rules mentioned by the Cabinet</div> <div><div>✗</div>3. Special Rules by the President</div> <div><div>✗</div>4. Rajya Sabha</div>		

Q.9	How many medals did Punjab University win at the Khelo India University Games event held in 2023?
Ans	<div><div><div>✖</div><div>1. 57</div></div><div><div>✖</div><div>2. 51</div></div><div><div>✖</div><div>3. 65</div></div><div><div>✔</div><div>4. 69</div></div></div>
Q.10	Which of the following numbers on the cheque should be noted to check its status?
Ans	<div><div><div>✔</div><div>1. Cheque number</div></div><div><div>✖</div><div>2. Last number on the cheque</div></div><div><div>✖</div><div>3. Indian Financial System Code</div></div><div><div>✖</div><div>4. Magnetic Ink Character Recognition number</div></div></div>
Q.11	Balakrishnabuwa Ichalkaranjikar was associated with which of the following musical gharanas?
Ans	<div><div><div>✖</div><div>1. Patiala gharana</div></div><div><div>✖</div><div>2. Kirana gharana</div></div><div><div>✖</div><div>3. Jaipur-Atrauli gharana</div></div><div><div>✔</div><div>4. Gwalior gharana</div></div></div>
Q.12	The Kinnauris of _____ perform Losar Shona Chuksam, a Kinnauri dance.
Ans	<div><div><div>✖</div><div>1. Madhya Pradesh</div></div><div><div>✔</div><div>2. Himachal Pradesh</div></div><div><div>✖</div><div>3. Arunachal Pradesh</div></div><div><div>✖</div><div>4. Uttar Pradesh</div></div></div>
Q.13	Which Indian labour law and social security measure aims to guarantee the 'right to work'?
Ans	<div><div><div>✖</div><div>1. The Employees' Provident Funds and Miscellaneous Provisions Act</div></div><div><div>✖</div><div>2. Indian Institutes of Management Act</div></div><div><div>✖</div><div>3. Citizenship Act</div></div><div><div>✔</div><div>4. Mahatma Gandhi National Rural Employment Guarantee Act</div></div></div>
Q.14	As per the 2023 statistic, which of the following neighbouring countries of India had the youngest mean population?
Ans	<div><div><div>✖</div><div>1. Sri Lanka</div></div><div><div>✖</div><div>2. Nepal</div></div><div><div>✔</div><div>3. Pakistan</div></div><div><div>✖</div><div>4. Bangladesh</div></div></div>
Q.15	Which of the following is NOT considered a Fundamental Right under the Indian Constitution?
Ans	<div><div><div>✖</div><div>1. Right to Privacy</div></div><div><div>✖</div><div>2. Right to Equality</div></div><div><div>✖</div><div>3. Right to Education</div></div><div><div>✔</div><div>4. Right to Property</div></div></div>

Q.16	Domar Singh Kunwar was awarded the prestigious Padma Shri-2023 for his significant contribution to theatrical dance, he is from which state?
Ans	<div><div><input type="checkbox"/></div><div>1. Jharkhand</div></div> <div><div><input checked="" type="checkbox"/></div><div>2. Chhattisgarh</div></div> <div><div><input type="checkbox"/></div><div>3. Assam</div></div> <div><div><input type="checkbox"/></div><div>4. Manipur</div></div>

Section : Part-C-Elementary Mathematics	
Q.1	Tirupati travels 120 km at the speed of 48 km/hr and another 180 km at the speed 45 km/hr. What is Tirupati's average speed (in km/hr) during the entire journey? (correct up to two decimal places)
Ans	<div><div><input checked="" type="checkbox"/></div><div>1. 46.15</div></div> <div><div><input type="checkbox"/></div><div>2. 46.51</div></div> <div><div><input type="checkbox"/></div><div>3. 45.51</div></div> <div><div><input type="checkbox"/></div><div>4. 47.15</div></div>

Q.3	Evaluate: $16 + 12 \div 4 - 2 \times 3$
Ans	<div> <div>✗ 1. 15</div> <div>✗ 2. 12</div> <div>✓ 3. 13</div> <div>✗ 4. 16</div> </div>
Q.4	What is the smallest number that should be added to 40 so that the result is the third proportional to 16 and 28?
Ans	<div> <div>✗ 1. 8</div> <div>✓ 2. 9</div> <div>✗ 3. 10</div> <div>✗ 4. 7</div> </div>
Q.5	The average weight of Tushar, Salil and Mukund is 45 kg. If the average weight of Tushar and Salil be 43 kg and that of Salil and Mukund be 44 kg, then the weight of Salil (in kg) is:
Ans	<div> <div>✗ 1. 54</div> <div>✗ 2. 59</div> <div>✓ 3. 39</div> <div>✗ 4. 49</div> </div>
Q.6	Ajit and Bimal can do a piece of work in 5, and 8 days, respectively, while Chandan can destroy the same work in 12 days. Ajit works on the 1 st day, Bimal works on the 2 nd day, Chandan works on the 3 rd day and so on. They follow the same pattern until the work gets completed. How many days will it take for the work to be completed the first time?
Ans	<div> <div>✗ 1. $9\frac{4}{5}$</div> <div>✓ 2. $10\frac{3}{5}$</div> <div>✗ 3. $10\frac{2}{5}$</div> <div>✗ 4. $9\frac{1}{8}$</div> </div>
Q.7	The value of $79 - 2 \times [10 + 8 \times \{16 - 8(6 - 5) \times 2\} \div 37]$ is:
Ans	<div> <div>✗ 1. 49</div> <div>✓ 2. 59</div> <div>✗ 3. 69</div> <div>✗ 4. 63</div> </div>
Q.8	Find the value of $\left[(16 \div 8) \times \left\{ \frac{40}{2} + \frac{11}{6} \times (8 - 2) \right\} \right]$
Ans	<div> <div>✗ 1. 78</div> <div>✓ 2. 62</div> <div>✗ 3. 76</div> <div>✗ 4. 68</div> </div>
Q.9	The simple interest on a principal amount (in ₹) is ₹540 for a period of 4 years at the rate of 2% per annum. The principal amount (in ₹) is:
Ans	<div> <div>✗ 1. 6745</div> <div>✗ 2. 6743</div> <div>✓ 3. 6750</div> <div>✗ 4. 6755</div> </div>

Q.10	T1 and T2 are the third proportional to 16, 36 and 24, 60, respectively. Find the ratio of T1 to T2.
Ans	<div> <div>✗ 1. 20 : 33</div> <div>✗ 2. 32 : 41</div> <div>✓ 3. 27 : 50</div> <div>✗ 4. 14 : 19</div> </div>
Q.11	Atul has two grandsons Baban and Rakesh. 11 year old Baban gets some money from Atul's wealth and 12 year old Rakesh gets rest of the money. But Baban and Rakesh will get money only when they turn 24 years old. Till then the money is in a bank getting interest at rate 5% compounded annually. When both turn 24, they receive the same amount. How much had Atul given Rakesh (in ₹) initially, if total money with Atul was ₹24600?
Ans	<div> <div>✓ 1. 12600</div> <div>✗ 2. 11750</div> <div>✗ 3. 12000</div> <div>✗ 4. 12950</div> </div>
Q.12	The greatest number that divides 210, 1245 and 2160 is:
Ans	<div> <div>✗ 1. 20</div> <div>✓ 2. 15</div> <div>✗ 3. 25</div> <div>✗ 4. 10</div> </div>
Q.13	If 50 bananas be sold for ₹160 at a loss of 20%. How many bananas should he sell for ₹1,540 so as to make 10% profit?
Ans	<div> <div>✗ 1. 320</div> <div>✗ 2. 300</div> <div>✗ 3. 360</div> <div>✓ 4. 350</div> </div>
Q.14	A dishonest shopkeeper promises to sell his goods at cost price. However, he uses a weight that actually weighs 48% less than what is written on it. Find his profit percentage.
Ans	<div> <div>✗ 1. $91\frac{4}{13}\%$</div> <div>✗ 2. $94\frac{8}{13}\%$</div> <div>✗ 3. $93\frac{5}{13}\%$</div> <div>✓ 4. $92\frac{4}{13}\%$</div> </div>
Q.15	What percentage above the cost price of an article should be marked so as to gain 25% after allowing a discount of 20%?
Ans	<div> <div>✗ 1. 65.25%</div> <div>✗ 2. 36.25%</div> <div>✗ 3. 63.25%</div> <div>✓ 4. 56.25%</div> </div>

Q.16	There are 50 students in a class. If the average weight of 39 students is 32 kg and the average weight of the entire class is 34 kg, then what is the average weight (in kg) of rest of the 11 students of the class? (Correct up to two decimal places)
Ans	<div>✗ 1. 42.18</div> <div>✓ 2. 41.09</div> <div>✗ 3. 40.19</div> <div>✗ 4. 43.08</div>
Q.17	<p>Bhanu travels from City A to City B. If Bhanu drives his car at $\frac{1}{4}$ of his normal speed, then he reaches City B 51 minutes late.</p> <p>Find the time (in minutes) that Bhanu would have taken to travel from City A to City B if he drove at his normal speed.</p>
Ans	<div>✗ 1. 12</div> <div>✓ 2. 17</div> <div>✗ 3. 20</div> <div>✗ 4. 15</div>
Q.18	The price (per litre) of petrol increases by 50%. By what percent should its consumption be reduced such that the expenditure on it increases by 32% only?
Ans	<div>✗ 1. 8%</div> <div>✓ 2. 12%</div> <div>✗ 3. 88%</div> <div>✗ 4. 95%</div>
Q.19	The area of a triangle is 250 cm ² . The ratio of its base to its height is 5 : 4. Find the length of its base.
Ans	<div>✗ 1. 40 cm</div> <div>✗ 2. 50 cm</div> <div>✗ 3. 20 cm</div> <div>✓ 4. 25 cm</div>
Q.20	The length of a rectangle increases by 15%. Find the percentage decrease in the breadth in order to maintain the area constantly. (Rounded off to 2 decimal places)
Ans	<div>✗ 1. 66.67%</div> <div>✗ 2. 86.96%</div> <div>✓ 3. 13.04%</div> <div>✗ 4. 23.33%</div>

Section : Part-D-English

Q.1	Select the most appropriate option to fill in the blank.
	Fungi are tiny organisms found everywhere—in nature, in our homes and even in and on _____ bodies.
Ans	<div>✗ 1. your</div> <div>✗ 2. their</div> <div>✗ 3. my</div> <div>✓ 4. our</div>

Q.2	<p>Select the most appropriate option that can substitute the underlined segment in the given sentence.</p> <p>I always make sure to like and comment <u>by my friends' posts</u>.</p>
Ans	<div><div><input checked="" type="checkbox"/></div>1. in my friends' posts</div> <div><div><input checked="" type="checkbox"/></div>2. on my friends' posts</div> <div><div><input checked="" type="checkbox"/></div>3. of my friends' posts</div> <div><div><input checked="" type="checkbox"/></div>4. around my friends' posts</div>
Q.3	<p>Select the most appropriate option that can substitute the underlined segment in the given sentence.</p> <p>Personal growth involves self-reflection and resilience, leading to a <u>deeper understanding of oneself</u>.</p>
Ans	<div><div><input checked="" type="checkbox"/></div>1. compoundable knowledge</div> <div><div><input checked="" type="checkbox"/></div>2. thorough analysis</div> <div><div><input checked="" type="checkbox"/></div>3. expanded aware</div> <div><div><input checked="" type="checkbox"/></div>4. in-depth grasp</div>
Q.4	<p>Select the most appropriate ANTONYM of the given word.</p> <p>Sagacious</p>
Ans	<div><div><input checked="" type="checkbox"/></div>1. Discerning</div> <div><div><input checked="" type="checkbox"/></div>2. Sensible</div> <div><div><input checked="" type="checkbox"/></div>3. Obtuse</div> <div><div><input checked="" type="checkbox"/></div>4. Sage</div>
Q.5	<p>Select the INCORRECTLY spelt word.</p>
Ans	<div><div><input checked="" type="checkbox"/></div>1. Dedication</div> <div><div><input checked="" type="checkbox"/></div>2. Apreciation</div> <div><div><input checked="" type="checkbox"/></div>3. Committee</div> <div><div><input checked="" type="checkbox"/></div>4. Expressed</div>
Q.6	<p>Select the most appropriate synonym of the given word.</p> <p>Exquisite</p>
Ans	<div><div><input checked="" type="checkbox"/></div>1. Rough</div> <div><div><input checked="" type="checkbox"/></div>2. Beautiful</div> <div><div><input checked="" type="checkbox"/></div>3. Ordinary</div> <div><div><input checked="" type="checkbox"/></div>4. Crude</div>
Q.7	<p>Select the most appropriate ANTONYM of the given word.</p> <p>Prudent</p>
Ans	<div><div><input checked="" type="checkbox"/></div>1. Probable</div> <div><div><input checked="" type="checkbox"/></div>2. Sensible</div> <div><div><input checked="" type="checkbox"/></div>3. Careful</div> <div><div><input checked="" type="checkbox"/></div>4. Unwise</div>
Q.8	<p>Select the most appropriate meaning of the given idiom.</p> <p>Never judge a book by its cover</p>
Ans	<div><div><input checked="" type="checkbox"/></div>1. Appearances can be deceiving.</div> <div><div><input checked="" type="checkbox"/></div>2. You should always judge people based on their possessions.</div> <div><div><input checked="" type="checkbox"/></div>3. Beautiful things are always valuable.</div> <div><div><input checked="" type="checkbox"/></div>4. First impressions are always accurate.</div>

Q.9	Select the most appropriate ANTONYM of the underlined word in the given sentence.
I found my neighbour frequently <u>upbraiding</u> his 5-year-old son for being playful all the time.	
Ans	<div><input checked="" type="checkbox"/> 1. beating</div> <div><input checked="" type="checkbox"/> 2. criticising</div> <div><input checked="" type="checkbox"/> 3. extolling</div> <div><input checked="" type="checkbox"/> 4. blaming</div>
Q.10	The following sentence has been split into four segments. Identify the segment that contains an error.
A) The beauty pageant has / B) been postponed farther due to / C) limited representation coming / D) from other states.	
Ans	<div><input checked="" type="checkbox"/> 1. D</div> <div><input checked="" type="checkbox"/> 2. A</div> <div><input checked="" type="checkbox"/> 3. B</div> <div><input checked="" type="checkbox"/> 4. C</div>
Q.11	The following sentence has been divided into parts. One of them may contain an error. Select the part that contains the error from the given options. If you don't find any error, mark 'No error' as your answer.
I am happy/ to know that/ her brother speaks German good.	
Ans	<div><input checked="" type="checkbox"/> 1. her brother speaks German good.</div> <div><input checked="" type="checkbox"/> 2. I am happy</div> <div><input checked="" type="checkbox"/> 3. No error.</div> <div><input checked="" type="checkbox"/> 4. to know that</div>
Q.12	Select the INCORRECTLY spelt word
Ans	<div><input checked="" type="checkbox"/> 1. Harmony</div> <div><input checked="" type="checkbox"/> 2. Leisure</div> <div><input checked="" type="checkbox"/> 3. Precise</div> <div><input checked="" type="checkbox"/> 4. Conveinient</div>
Q.13	Select the most appropriate option to fill in the blank.
Most of the students in the first year were unable to score good marks due to their _____ nature.	
Ans	<div><input checked="" type="checkbox"/> 1. deliberate</div> <div><input checked="" type="checkbox"/> 2. enthusiastic</div> <div><input checked="" type="checkbox"/> 3. concerned</div> <div><input checked="" type="checkbox"/> 4. nonchalant</div>
Q.14	Select the most appropriate option to fill in the blank.
They _____ a problem with the internet connection, but it's fixed now.	
Ans	<div><input checked="" type="checkbox"/> 1. have</div> <div><input checked="" type="checkbox"/> 2. had</div> <div><input checked="" type="checkbox"/> 3. do</div> <div><input checked="" type="checkbox"/> 4. make</div>

Q.15 Select the most appropriate ANTONYM of the given word.
Brazen

- Ans
- ☒ 1. Distinct
 - ☒ 2. Timid
 - ☒ 3. Anxious
 - ☒ 4. Concerned

Comprehension:

In the following passage, some words have been deleted. Read the passage carefully and select the most appropriate option to fill in each blank.

The widespread use of plastic has become a significant environmental concern due to its impact on ecosystems and human health. Plastic products, (1)_____ are often designed for single use, contribute to massive amounts of waste that persist in landfills and oceans (2)_____ hundreds of years. This persistent waste not only clogs waterways and harms marine life but also breaks down into microplastics that enter the food chain, posing risks to (3)_____ wildlife and humans. The (4)_____ of plastic is overshadowed by its long-term environmental costs, making it imperative to explore sustainable alternatives and reduce plastic consumption. Addressing plastic usage requires (5)_____ collective effort to adopt more eco-friendly practices, support recycling initiatives and invest in innovative materials that minimize environmental impact.

SubQuestion No : 16

Q.16 Select the most appropriate option to fill in blank no. 1.

- Ans
- ☒ 1. whose
 - ☒ 2. which
 - ☒ 3. where
 - ☒ 4. when

Comprehension:

In the following passage, some words have been deleted. Read the passage carefully and select the most appropriate option to fill in each blank.

The widespread use of plastic has become a significant environmental concern due to its impact on ecosystems and human health. Plastic products, (1)_____ are often designed for single use, contribute to massive amounts of waste that persist in landfills and oceans (2)_____ hundreds of years. This persistent waste not only clogs waterways and harms marine life but also breaks down into microplastics that enter the food chain, posing risks to (3)_____ wildlife and humans. The (4)_____ of plastic is overshadowed by its long-term environmental costs, making it imperative to explore sustainable alternatives and reduce plastic consumption. Addressing plastic usage requires (5)_____ collective effort to adopt more eco-friendly practices, support recycling initiatives and invest in innovative materials that minimize environmental impact.

SubQuestion No : 17

Q.17 Select the most appropriate option to fill in blank no. 2.

- Ans
- ☒ 1. across
 - ☒ 2. since
 - ☒ 3. among
 - ☒ 4. for

Comprehension:

In the following passage, some words have been deleted. Read the passage carefully and select the most appropriate option to fill in each blank.

The widespread use of plastic has become a significant environmental concern due to its impact on ecosystems and human health. Plastic products, (1)_____ are often designed for single use, contribute to massive amounts of waste that persist in landfills and oceans (2)_____ hundreds of years. This persistent waste not only clogs waterways and harms marine life but also breaks down into microplastics that enter the food chain, posing risks to (3)_____ wildlife and humans. The (4)_____ of plastic is overshadowed by its long-term environmental costs, making it imperative to explore sustainable alternatives and reduce plastic consumption. Addressing plastic usage requires (5)_____ collective effort to adopt more eco-friendly practices, support recycling initiatives and invest in innovative materials that minimize environmental impact.

SubQuestion No : 18

Q.18 Select the most appropriate option to fill in blank no. 3.

- Ans
- ☒ 1. because
 - ☒ 2. yet
 - ☒ 3. both
 - ☒ 4. but

Comprehension:

In the following passage, some words have been deleted. Read the passage carefully and select the most appropriate option to fill in each blank.

The widespread use of plastic has become a significant environmental concern due to its impact on ecosystems and human health. Plastic products, (1)_____ are often designed for single use, contribute to massive amounts of waste that persist in landfills and oceans (2)_____ hundreds of years. This persistent waste not only clogs waterways and harms marine life but also breaks down into microplastics that enter the food chain, posing risks to (3)_____ wildlife and humans. The (4)_____ of plastic is overshadowed by its long-term environmental costs, making it imperative to explore sustainable alternatives and reduce plastic consumption. Addressing plastic usage requires (5)_____ collective effort to adopt more eco-friendly practices, support recycling initiatives and invest in innovative materials that minimize environmental impact.

SubQuestion No : 19

Q.19 Select the most appropriate option to fill in blank no. 4.

- Ans
- ☒ 1. conveniency
 - ☒ 2. conveniences
 - ☒ 3. conveniently
 - ☒ 4. convenience

Comprehension:

In the following passage, some words have been deleted. Read the passage carefully and select the most appropriate option to fill in each blank.

The widespread use of plastic has become a significant environmental concern due to its impact on ecosystems and human health. Plastic products, (1)_____ are often designed for single use, contribute to massive amounts of waste that persist in landfills and oceans (2)_____ hundreds of years. This persistent waste not only clogs waterways and harms marine life but also breaks down into microplastics that enter the food chain, posing risks to (3)_____ wildlife and humans. The (4)_____ of plastic is overshadowed by its long-term environmental costs, making it imperative to explore sustainable alternatives and reduce plastic consumption. Addressing plastic usage requires (5)_____ collective effort to adopt more eco-friendly practices, support recycling initiatives and invest in innovative materials that minimize environmental impact.

SubQuestion No : 20

Q.20 Select the most appropriate option to fill in blank no. 5.

- Ans
- ☒ 1. the
 - ☒ 2. an
 - ☒ 3. a
 - ☒ 4. No article required

Section : Part-D-Hindi

Q.1 रेखांकित शब्द के स्थान पर सर्वोचित विकल्प चुनिए।

आज के नेताओं और स्वतंत्रता प्राप्ति के पहले के नेताओं की कोई बराबरी नहीं हो सकती।

- Ans
- ☒ 1. समरूपता
 - ☒ 2. समीपता
 - ☒ 3. तुलना
 - ☒ 4. समता

Q.2 'सरस' शब्द का विलोम शब्द क्या होगा?

- Ans
- ☒ 1. नीरस
 - ☒ 2. रसिक
 - ☒ 3. कठोर
 - ☒ 4. सरल

Q.3 निम्न में से 'होनी' का विलोम है-

- Ans
- ☒ 1. असत्य
 - ☒ 2. अनहोनी
 - ☒ 3. अहोनी
 - ☒ 4. होनहार

Q.4	‘मेज पर एक डिब्बा रखा है, जिसमें मिठाई रखी है ।’ वाक्य में प्रयुक्त कौन सा शब्द देशज है?
Ans	<div><div><input type="checkbox"/></div>1. मिठाई</div> <div><div><input checked="" type="checkbox"/></div>2. डिब्बा</div> <div><div><input type="checkbox"/></div>3. रखी</div> <div><div><input type="checkbox"/></div>4. मेज</div>
Q.5	निम्नलिखित में से किस वाक्य में एक दूसरे के उचित विलोम शब्द का प्रयोग नहीं किया गया है?
Ans	<div><div><input type="checkbox"/></div>1. शृंगार के दो भेद हैं - संयोग और वियोग</div> <div><div><input checked="" type="checkbox"/></div>2. विशिष्ट - शिष्ट मेहमान के लिए विशेष प्रबंध है।</div> <div><div><input type="checkbox"/></div>3. यश - अपयश कर्म पर निर्भर करता है।</div> <div><div><input type="checkbox"/></div>4. स्थावर और जंगम एक दूसरे के विलोम शब्द हैं।</div>
Q.6	‘सुआ’ पर्याय है-
Ans	<div><div><input checked="" type="checkbox"/></div>1. तोते का</div> <div><div><input type="checkbox"/></div>2. मुर्गे का</div> <div><div><input type="checkbox"/></div>3. कोयल का</div> <div><div><input type="checkbox"/></div>4. मोर का</div>
Q.7	‘मैंने अपने पूज्य पिताजी को एक पत्र लिखकर यहाँ की स्थिती से अवगत करा दिया है।’ उपरोक्त वाक्य के किस भाग में वर्तनी सम्बन्धी अशुद्धि है?
Ans	<div><div><input type="checkbox"/></div>1. अवगत करा दिया है</div> <div><div><input checked="" type="checkbox"/></div>2. यहाँ की स्थिती से</div> <div><div><input type="checkbox"/></div>3. एक पत्र लिखकर</div> <div><div><input type="checkbox"/></div>4. मैंने अपने पूज्य पिताजी को</div>
Q.8	‘ अरे भगवान ! मेरी रक्षा करो ।’ वाक्य शुद्धि हेतु रेखांकित स्थान पर उचित कारक होगा -
Ans	<div><div><input type="checkbox"/></div>1. से</div> <div><div><input type="checkbox"/></div>2. पर</div> <div><div><input checked="" type="checkbox"/></div>3. हे</div> <div><div><input type="checkbox"/></div>4. के लिए</div>
Q.9	‘गाल फुलाना’ मुहावरे का सही अर्थ इनमें से क्या होगा?
Ans	<div><div><input type="checkbox"/></div>1. गुस्सा करना</div> <div><div><input type="checkbox"/></div>2. अधिक खा लेना</div> <div><div><input type="checkbox"/></div>3. भूख लगना</div> <div><div><input checked="" type="checkbox"/></div>4. रूठ जाना</div>
Q.10	निम्नलिखित वाक्यांश के लिए सार्थक शब्द चुनिए - जो चिरकाल तक रहे
Ans	<div><div><input type="checkbox"/></div>1. अस्थायी</div> <div><div><input checked="" type="checkbox"/></div>2. चिरस्थायी</div> <div><div><input type="checkbox"/></div>3. लगातार</div> <div><div><input type="checkbox"/></div>4. निरंतर</div>

Q.11	रिक्त स्थान की पूर्ति तत्सम शब्द से करें- प्राचीन काल से पानी के घड़ों का निर्माण... से होता है।
Ans	<div><div><div>✗</div><div>1. सोना</div></div><div><div>✗</div><div>2. मिट्टी</div></div><div><div>✓</div><div>3. मृत्तिका</div></div><div><div>✗</div><div>4. लोहा</div></div></div>
Q.12	‘आधे से अधिक लोगों की मिलकर एक राय’ उपरोक्त वाक्यांश के लिए एक शब्द होगा-
Ans	<div><div><div>✗</div><div>1. लोकतंत्र</div></div><div><div>✓</div><div>2. बहुमत</div></div><div><div>✗</div><div>3. अल्पमत</div></div><div><div>✗</div><div>4. बहुमल</div></div></div>
Q.13	निम्नलिखित में से किस विकल्प में उभयलिंगी शब्द उपस्थित है?
Ans	<div><div><div>✓</div><div>1. मंद-मंद पवन का चलना अच्छा लगता है।</div></div><div><div>✗</div><div>2. हमारी आकाशगंगा में पुच्छल तारा भी है।</div></div><div><div>✗</div><div>3. प्रत्येक वस्तु का एक निश्चित मूल्य होता है।</div></div><div><div>✗</div><div>4. सभी अक्षर ठीक से लिखे गए हैं।</div></div></div>
Q.14	निम्नलिखित वाक्य के किस खंड में अशुद्धि है? शत्रु उस पर टूट गए।
Ans	<div><div><div>✗</div><div>1. उस</div></div><div><div>✗</div><div>2. टूट</div></div><div><div>✗</div><div>3. शत्रु</div></div><div><div>✓</div><div>4. गए</div></div></div>
Q.15	दिए गए वाक्यांश के लिए एक शब्द होगा— आगे बढ़कर स्वागत करना-
Ans	<div><div><div>✗</div><div>1. अगुआना</div></div><div><div>✗</div><div>2. अगुआ</div></div><div><div>✗</div><div>3. अग्रगामी</div></div><div><div>✓</div><div>4. अगवानी</div></div></div>
<p>Comprehension:</p> <p>गद्यांश के आधार पर प्रश्न का उत्तर दें। मनुष्य उत्सवप्रिय होते हैं। उत्सवों का एकमात्र _____ आनंद-प्राप्ति है। यह तो सभी जानते हैं कि मनुष्य अपनी आवश्यकता की पूर्ति के लिए आजीवन प्रयत्न करता रहता है। आवश्यकता की _____ होने पर सभी को सुख होता है पर, उस सुख और उत्सव के इस आनंद में बड़ा अंतर है आवश्यकता अभाव सूचित करती है। उससे यह प्रकट होता है कि हममें किसी बात की कमी है। मनुष्य-जीवन ही ऐसा है कि वह किसी भी अवस्था में यह अनुभव नहीं कर सकता कि अब उसके लिए कोई _____ नहीं रह गई है। एक के बाद दूसरी वस्तु की चिंता उसे सताती ही रहती है। इसलिए किसी एक आवश्यकता की पूर्ति से उसे जो सुख होता है, वह अत्यंत _____ होता है; क्योंकि तुरंत ही दूसरी आवश्यकता उपस्थित होजाती है। उत्सव में हम किसी बात की आवश्यकता का अनुभव नहीं करते। यही नहीं, उस दिन हम अपने काम-काज छोड़कर विशुद्ध _____ की प्राप्ति करते हैं।</p> <p>SubQuestion No : 16</p>	
Q.16	रिक्त स्थान पर सही शब्द विकल्प का चयन करें। उत्सवों का एकमात्र _____ आनंद-प्रारित है।
Ans	<div><div><div>✗</div><div>1. ऊपाय</div></div><div><div>✗</div><div>2. कार्य</div></div><div><div>✗</div><div>3. अर्थ</div></div><div><div>✓</div><div>4. उद्देश्य</div></div></div>

Comprehension:

गद्यांश के आधार पर प्रश्न का उत्तर दें।
मनुष्य उत्सवप्रिय होते हैं। उत्सवों का एकमात्र _____ आनंद-प्राप्ति है। यह तो सभी जानते हैं कि मनुष्य अपनी आवश्यकता की पूर्ति के लिए आजीवन प्रयत्न करता रहता है। आवश्यकता की _____ होने पर सभी को सुख होता है पर, उस सुख और उत्सव के इस आनंद में बड़ा अंतर है आवश्यकता अभाव सूचित करती है। उससे यह प्रकट होता है कि हममें किसी बात की कमी है। मनुष्य-जीवन ही ऐसा है कि वह किसी भी अवस्था में यह अनुभव नहीं कर सकता कि अब उसके लिए कोई _____ नहीं रह गई है। एक के बाद दूसरी वस्तु की चिंता उसे सताती ही रहती है। इसलिए किसी एक आवश्यकता की पूर्ति से उसे जो सुख होता है, वह अत्यंत _____ होता है; क्योंकि तुरंत ही दूसरी आवश्यकता उपस्थित होजाती है। उत्सव में हम किसी बात की आवश्यकता का अनुभव नहीं करते। यही नहीं, उस दिन हम अपने काम-काज छोड़कर विशद्व _____ की प्राप्ति करते हैं।

SubQuestion No : 17

Q.17 रिक्त स्थान पर सही शब्द विकल्प का चयन करें।
आवश्यकता की _____ होने पर सभी को सुख होता है। पर उस सुख और उत्सव के आनंद में बड़ा अन्तर है।

- Ans
- ☒ 1. प्राप्ति
 - ☒ 2. पूर्ण
 - ☒ 3. पूर्ति
 - ☒ 4. पूरा

Comprehension:

गद्यांश के आधार पर प्रश्न का उत्तर दें।
मनुष्य उत्सवप्रिय होते हैं। उत्सवों का एकमात्र _____ आनंद-प्राप्ति है। यह तो सभी जानते हैं कि मनुष्य अपनी आवश्यकता की पूर्ति के लिए आजीवन प्रयत्न करता रहता है। आवश्यकता की _____ होने पर सभी को सुख होता है पर, उस सुख और उत्सव के इस आनंद में बड़ा अंतर है आवश्यकता अभाव सूचित करती है। उससे यह प्रकट होता है कि हममें किसी बात की कमी है। मनुष्य-जीवन ही ऐसा है कि वह किसी भी अवस्था में यह अनुभव नहीं कर सकता कि अब उसके लिए कोई _____ नहीं रह गई है। एक के बाद दूसरी वस्तु की चिंता उसे सताती ही रहती है। इसलिए किसी एक आवश्यकता की पूर्ति से उसे जो सुख होता है, वह अत्यंत _____ होता है; क्योंकि तुरंत ही दूसरी आवश्यकता उपस्थित होजाती है। उत्सव में हम किसी बात की आवश्यकता का अनुभव नहीं करते। यही नहीं, उस दिन हम अपने काम-काज छोड़कर विशद्व _____ की प्राप्ति करते हैं।

SubQuestion No : 18

Q.18 रिक्त स्थान पर सही शब्द विकल्प का चयन करें।
मनुष्य-जीवन ही ऐसा है कि वह किसी भी अवस्था में यह अनुभव नहीं कर सकता कि अब उसके लिए कोई _____ नहीं रह गई है।

- Ans
- ☒ 1. आवश्यकता
 - ☒ 2. रास्ता
 - ☒ 3. महत्ता
 - ☒ 4. चीज

Comprehension:

गद्यांश के आधार पर प्रश्न का उत्तर दें।
मनुष्य उत्सवप्रिय होते हैं। उत्सवों का एकमात्र _____ आनंद-प्राप्ति है। यह तो सभी जानते हैं कि मनुष्य अपनी आवश्यकता की पूर्ति के लिए आजीवन प्रयत्न करता रहता है। आवश्यकता की _____ होने पर सभी को सुख होता है पर, उस सुख और उत्सव के इस आनंद में बड़ा अंतर है आवश्यकता अभाव सूचित करती है। उससे यह प्रकट होता है कि हममें किसी बात की कमी है। मनुष्य-जीवन ही ऐसा है कि वह किसी भी अवस्था में यह अनुभव नहीं कर सकता कि अब उसके लिए कोई _____ नहीं रह गई है। एक के बाद दूसरी वस्तु की चिंता उसे सताती ही रहती है। इसलिए किसी एक आवश्यकता की पूर्ति से उसे जो सुख होता है, वह अत्यंत _____ होता है; क्योंकि तुरंत ही दूसरी आवश्यकता उपस्थित होजाती है। उत्सव में हम किसी बात की आवश्यकता का अनुभव नहीं करते। यही नहीं, उस दिन हम अपने काम-काज छोड़कर विशद्व _____ की प्राप्ति करते हैं।

SubQuestion No : 19

Q.19 रिक्त स्थान पर सही शब्द विकल्प का चयन करें।
इसलिए किसी एक आवश्यकता की पूर्ति से उसे जो सुख होता है, वह अत्यंत _____ होता है; क्योंकि तुरंत ही दूसरी आवश्यकता उपस्थित हो जाती है।

- Ans
- ☒ 1. स्थायी
 - ☒ 2. संतोषप्रद
 - ☒ 3. पूर्ण
 - ☒ 4. क्षणिक

Comprehension:

गद्यांश के आधार पर प्रश्न का उत्तर दें।
मनुष्य उत्सवप्रिय होते हैं। उत्सवों का एकमात्र _____ आनंद-प्राप्ति है। यह तो सभी जानते हैं कि मनुष्य अपनी आवश्यकता की पूर्ति के लिए आजीवन प्रयत्न करता रहता है। आवश्यकता की _____ होने पर सभी को सुख होता है पर, उस सुख और उत्सव के इस आनंद में बड़ा अंतर है आवश्यकता अभाव सूचित करती है। उससे यह प्रकट होता है कि हममें किसी बात की कमी है। मनुष्य-जीवन ही ऐसा है कि वह किसी भी अवस्था में यह अनुभव नहीं कर सकता कि अब उसके लिए कोई _____ नहीं रह गई है। एक के बाद दूसरी वस्तु की चिंता उसे सताती ही रहती है। इसलिए किसी एक आवश्यकता की पूर्ति से उसे जो सुख होता है, वह अत्यंत _____ होता है; क्योंकि तुरंत ही दूसरी आवश्यकता उपस्थित होजाती है। उत्सव में हम किसी बात की आवश्यकता का अनुभव नहीं करते। यही नहीं, उस दिन हम अपने काम-काज छोड़कर विशुद्ध _____ की प्राप्ति करते हैं।

SubQuestion No : 20

Q.20 रिक्त स्थान पर सही शब्द विकल्प का चयन करें।
यही नहीं उस दिन हम अपने काम-काज छोड़कर विशुद्ध _____ की प्राप्ति करते हैं।

- Ans**
- ☒ 1. संतोष
 - ☒ 2. सुख
 - ☒ 3. आनंद
 - ☒ 4. दुःख