

## Constable GD in CAPFs and SSF Rifleman GD in AR and Sepoy in NCB Examination 2025

|           |                               |
|-----------|-------------------------------|
| Exam Date | 25/02/2025                    |
| Exam Time | 12:00 PM - 1:00 PM            |
| Subject   | Constable GD Examination 2025 |

### Section : Part-A-General Intelligence and Reasoning

**Q.1** In a certain code language,  
'A / B' means 'A is the father of B',  
'A : B' means 'A is the wife of B',  
'A ! B' means 'A is the brother of B' and  
'A < B' means 'A is the son of B'.

How is T related to S if 'T < I / M : E ! S'?

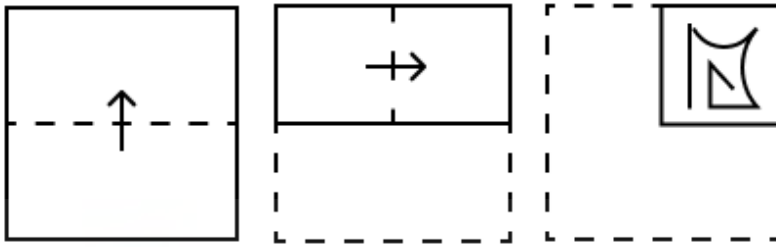
- Ans**
- 1. Brother's wife's mother
  - 2. Brother's wife's brother
  - 3. Brother's wife's sister
  - 4. Brother's wife's father

**Q.2** Based on the English alphabetical order, three of the following four letter-clusters are alike in a certain way and thus form a group. Which letter-cluster DOES NOT belong to that group?

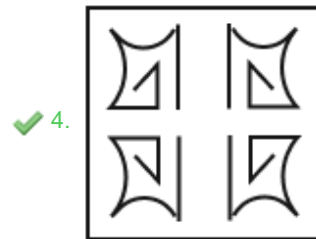
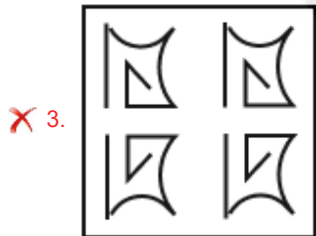
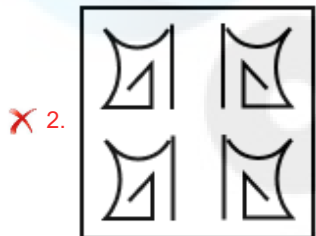
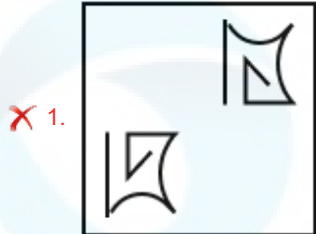
(Note: The odd one out is not based on the number of consonants/vowels or their position in the letter-cluster.)

- Ans**
- 1. UWT
  - 2. OQN
  - 3. GHF
  - 4. MOL

Q.3 A paper is folded and punched as shown below. How will it appear when unfolded?



Ans



Q.4 Eight people are sitting in two parallel rows containing 4 people each, in such a way that there is equal distance between adjacent persons.

In row 1 – W, O, R and K are seated and all of them are facing south

In row 2 – P, A, S and T are seated and all of them are facing north.

Thus, each person faces another person from the other row.

K sits second to the left of R. T sits second to the right of A. Only two people sit between A and P. O faces S.

Which of the following options represents both people sitting at the extreme ends of the rows?

Ans ✓ 1. R and P

✗ 2. O and T

✗ 3. P and O

✗ 4. S and W

Q.5 ZLER is related to BJBT in a certain way based on the English alphabetical order. In the same way, NDSG is related to PBPI. To which of the following is YIHB related, following the same logic?

Ans ✗ 1. ACDC

✗ 2. BHFE

✗ 3. ZIDF

✓ 4. AGED

**Q.6** What should come in place of the question mark (?) in the given series?

45 45 46 50 59 ?

- Ans**
- 1. 76
  - 2. 74
  - 3. 77
  - 4. 75

**Q.7** In a certain code language, 'mind your words' is coded as 'at bd kj' and 'use words wisely' is coded as 'hk kj bo'. How is 'words' coded in the given language?

- Ans**
- 1. at
  - 2. kj
  - 3. bd
  - 4. hk

**Q.8** Read the given statements and conclusions carefully. Assuming that the information given in the statements is true, even if it appears to be at variance with commonly known facts, decide which of the given conclusions logically follow(s) from the statements.

**Statements:**

All dress are cloth.

All shirts are cloth.

All ties are cloth.

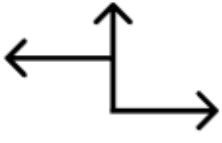
**Conclusions:**

(I): Some ties are dress.

(II): Some shirts are tie.

- Ans**
- 1. Neither conclusion (I) nor (II) follows.
  - 2. Both conclusions (I) and (II) follow.
  - 3. Only conclusion (I) follows.
  - 4. Only conclusion (II) follows.

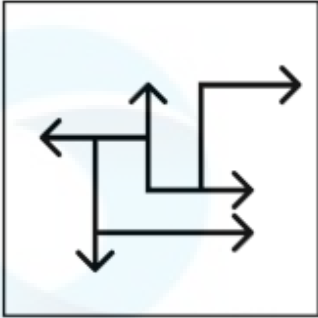
Q.9 Select the option in which the given figure (X) is embedded (rotation is NOT allowed).



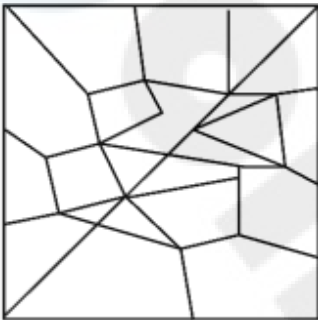
(X)

Ans

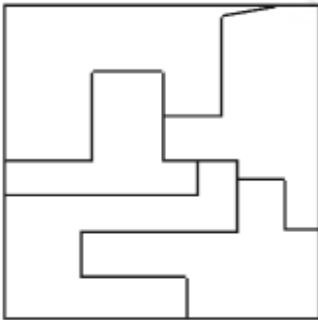
✓ 1.



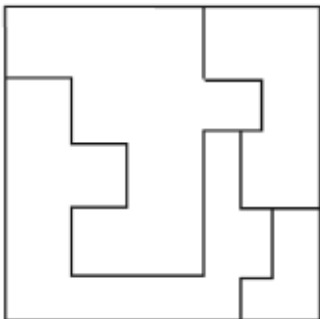
✗ 2.



✗ 3.



✗ 4.



Q.10 What should come in place of the question mark (?) in the given series based on the English alphabetical order?  
ABC FGH LMN STU ?

Ans ✓ 1. ABC

✗ 2. IJK

✗ 3. WXY

✗ 4. RST

**Q.11** Select the combination of letters that when filled in the blanks in the same sequence will make the series logically complete.  
\_GIMK\_JNLI\_OMJL\_NKM\_

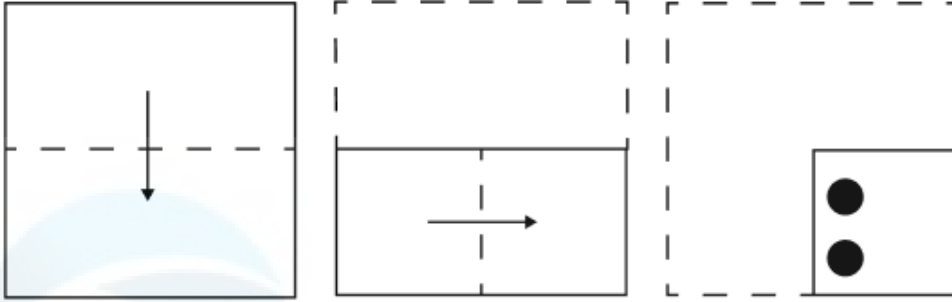
- Ans**
- 1. JIKRQ
  - 2. FHMPT
  - 3. FIMRT
  - 4. JHKPQ

**Q.12** What will come in the place of the question mark '?' in the following equation, if '+' and 'x' are interchanged and '-' and '÷' are interchanged?

$$11 - 9 \div 2 + 16 \times 8 = ?$$

- Ans**
- 1. 27
  - 2. 28
  - 3. 26
  - 4. 25

Q.13 A square sheet of paper is folded along the dotted line successively along the directions shown and is then punched in the end. How would the paper look when unfolded?




Ans


X 1.




X 2.



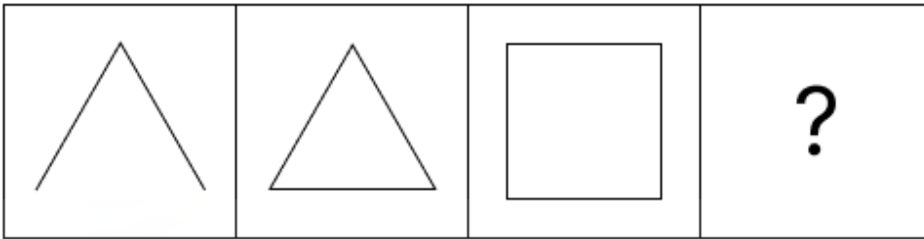
✓ 3.



X 4.

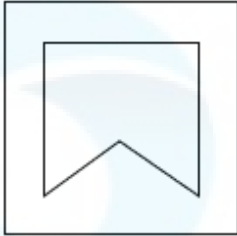


Q.14 Identify the figure given in the options, which when put in place of the question mark (?) will logically complete the series.



Ans

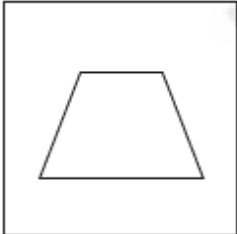
✓ 1.



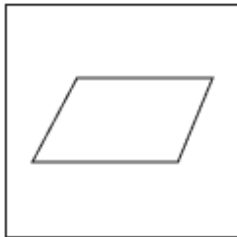
✗ 2.



✗ 3.



✗ 4.



Q.15 What should come in place of the question mark (?) in the given series?

5 14 22 48 56 ?

Ans ✓ 1. 116

✗ 2. 161

✗ 3. 112

✗ 4. 121

Q.16 In a certain code language 'LQAB' is coded as '32' and 'CMGP' is coded as '39'. What is the code for 'SJZC' in the given language?

Ans ✓ 1. 58

✗ 2. 49

✗ 3. 42

✗ 4. 60

Q.17 Six friends, A, B, C, K, L and M, are sitting in a straight line facing north (but not necessarily in the same order) . Only two people sit between A and M. B sits to the immediate left of M. No one sits to the right of C. Only two people sit between C and B. B sits to the immediate right of L. How many people sit to the left of K?

- Ans
- 1. Two
  - 2. Three
  - 3. Four
  - 4. One

Q.18 MEGA is related to OFIB in a certain way based on the English alphabetical order. In the same way, UIOE is related to WJQF. To which of the given options is ALUH related, following the same logic?

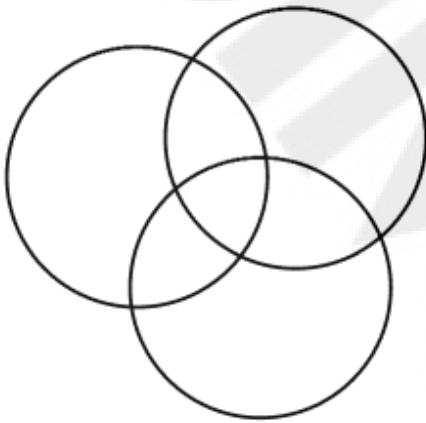
- Ans
- 1. CMIW
  - 2. CMWI
  - 3. CWMI
  - 4. WCMi

Q.19 Select the Venn diagram that best illustrates the relationship between the following classes.

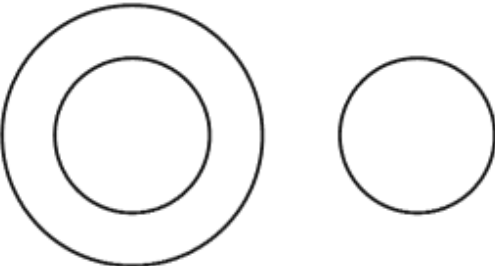
Alphabet, Consonants, Vowels

Ans


1.



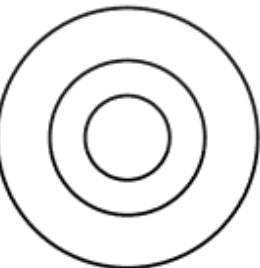
2.



3.



4.



**Q.20** The position(s) of how many letters will remain unchanged if each of the letters in the word DAUGHTER is arranged in the English alphabetical order?

- Ans**
- 1. One
  - 2. Four
  - 3. Two
  - 4. Three

Section : Part-B-General Knowledge and General awareness

**Q.1** Which of the following elements are present in Urea?

- Ans**
- 1. Only Carbon, Hydrogen and Nitrogen
  - 2. Only Carbon and Nitrogen
  - 3. Only Hydrogen and Nitrogen
  - 4. Carbon, Hydrogen, Oxygen and Nitrogen

**Q.2** The Gulf Stream is a fast, warm ocean current in which ocean?

- Ans**
- 1. Southern Ocean
  - 2. Pacific Ocean
  - 3. Indian Ocean
  - 4. Atlantic Ocean

**Q.3** Vasanthalakshmi Narasimhachari, who won the Nritya Kalanidhi Award 2023, excels in which two dance forms?

- Ans**
- 1. Sattriya and Mohiniyattam
  - 2. Manipuri and Chau
  - 3. Bharatanatyam and Kuchipudi
  - 4. Kathak and Odissi

**Q.4** Which dance form has evolved since the 19<sup>th</sup> century under the patronage of King Swathi Thirunal of Travancore?

- Ans**
- 1. Kuchipudi
  - 2. Mohiniattam
  - 3. Kathak
  - 4. Kathakali

**Q.5** How many Directive Principles of State Policy were added by the 42<sup>nd</sup> Amendment Act of 1976 to the original list?

- Ans**
- 1. Six
  - 2. Seven
  - 3. Two
  - 4. Four

**Q.6** When was PM Surya Ghar: Muft Bijli Yojana launched?

- Ans**
- 1. March 2024
  - 2. October 2024
  - 3. November 2024
  - 4. February 2024

**Q.7** Which Greek ambassador chronicled his observations during his visit to the court of Chandragupta Maurya?

- Ans**
- 1. Megasthenes
  - 2. Pliny the Elder
  - 3. Ptolemy
  - 4. Herodotus

**Q.8** A bow, a string, a bracer, a finger tab, a quiver, a bow stand, a bow stringer and a target to shoot at are equipment of \_\_\_\_\_.

- Ans**
- 1. Fencing
  - 2. Shooting
  - 3. Bobsleigh
  - 4. Archery

**Q.9** Which movement was launched in 1942 with the call for 'Do or Die'?

- Ans**
- 1. Civil Disobedience Movement
  - 2. Swadeshi Movement
  - 3. Non-Cooperation Movement
  - 4. Quit India Movement

**Q.10** Which of the following bodies is authorised to change the name of any state of India?

- Ans**
- 1. Governor
  - 2. Parliament
  - 3. Chief Justice of India
  - 4. Council of Ministers

**Q.11** Bismillah Khan, the shehnai maestro, was born in the town of Dumraon which is now located in the Indian state of \_\_\_\_\_.

- Ans**
- 1. Himachal Pradesh
  - 2. Kerala
  - 3. Rajasthan
  - 4. Bihar

**Q.12** In which city of India was the AIFF-FIFA Football Academy launched in 2023?

- Ans**
- 1. Bhubaneswar
  - 2. Delhi
  - 3. Kolkata
  - 4. Solan

**Q.13** As of October 2024, who is the secretary of the Department of Atomic Energy?

- Ans**
- 1. Rakesh Sinha
  - 2. Dr. Ajit Kumar Mohanty
  - 3. Ramesh Chauhan
  - 4. Dr. Roshan Basu

**Q.14** Below are few statements about vaccination. Select the correct statement/s.

**Statement A:**In vaccination, a preparation of antigenic proteins of pathogens or inactivated/weakened pathogens (vaccine) are introduced into the body.

**Statement B:**The vaccines generate memory-B and T-cells that recognise the pathogens quickly.

- Ans**
- 1. Only statement B is correct
  - 2. Only statement A is correct
  - 3. Both statements A and B are correct
  - 4. Both statements A and B Incorrect

**Q.15** What is the literacy rate of Schedule Tribes people of India as per Census 2011?

- Ans**
- 1. 76.23%
  - 2. 59.00%
  - 3. 84.90%
  - 4. 51.23%

**Q.16** Which of the following statements is/are INCORRECT?

- i. The Government of India launched 'National Agriculture Market' ('e-NAM') Scheme in 2016.
- ii. In India, the agriculture credit flow for the year 2020-21 was ₹15,75,398 crore.
- iii. The Government of India launched 'National Mission on Edible Oils - Oil Palm' ('NMEO-OP') in 2023.

- Ans**
- 1. Only i and ii
  - 2. Only iii
  - 3. Only ii and iii
  - 4. Only i

**Q.17** The tableau of \_\_\_\_\_, based on the theme 'Manaskhand', was given away the best tableau award among the 17 states/union territories tableaux in 2023.

- Ans**
- 1. Uttarakhand
  - 2. Bihar
  - 3. Gujarat
  - 4. Uttar Pradesh

**Q.18** Which of the following neighbouring countries of India is secular?

- Ans**
- 1. Maldives
  - 2. Afghanistan
  - 3. Nepal
  - 4. Pakistan

**Q.19** Why is the service industry important in the modern economy?

- Ans**
- 1. It provides raw materials for other industries.
  - 2. It only affects small businesses.
  - 3. It plays a key role in the provision of activities that aid economic development.
  - 4. It manufactures essential goods.

**Q.20** What is the effect of foreign trade on markets?

- Ans**
- 1. It leads to a greater integration of markets.
  - 2. It makes domestic goods more expensive.
  - 3. It reduces competition.
  - 4. It isolates markets.

## Section : Part-C-Elementary Mathematics

Q.1 If the average marks of three sections of Class IX, having 30, 45 and 50 students, respectively, is 80, 75 and 90, then the average marks of all the students of Class IX, is:

- Ans
- 1. 85.6
  - 2. 82.2
  - 3. 78.4
  - 4. 80.9

Q.2 Compare the ratios 12 : 13, 7 : 8, 9 : 10, and 5 : 6. Which one is greater than 0.9 but smaller than 0.95?

- Ans
- 1. 9 : 10
  - 2. 7 : 8
  - 3. 12 : 13
  - 4. 5 : 6

Q.3 To finish a work in 8 days, 10 men are required, or 15 women are required. If 'x' men and 'y' women are required to finish the work in 12 days, then which of the following equations is correct?

- Ans
- 1.  $3x + 2y = 20$
  - 2.  $2x + 3y = 30$
  - 3.  $2x + 3y = 20$
  - 4.  $3x + 2y = 30$

Q.4 Ashok has ₹1612 with him. He divided it amongst his sons Raj and Varun and asked them to invest it at 8% rate of interest compounded annually. It was seen that Raj and Varun got same amount after 16 and 17 years respectively. How much (in ₹) did Ashok give to Raj?

- Ans
- 1. 837
  - 2. 875
  - 3. 775
  - 4. 687

Q.5 Two trains are moving in opposite directions at speeds of 140 km/h and 80 km/h. The length of one train is 340 m. The time taken by them to cross each other is 11 seconds. The length (in m) of the other train, correct to 2 decimal places, is:

- Ans
- 1. 330.83
  - 2. 331.39
  - 3. 332.22
  - 4. 330.66

Q.6 Evaluate:  $(-9) - (-60) \div (-12) + (-4) \times 7$

- Ans
- 1. -41
  - 2. -45
  - 3. -42
  - 4. -44

Q.7 The value of  $66 - 2 \times [10 + 2 \times \{18 - 2(7 - 4) \times 3\} \div 50]$  is:

- Ans
- 1. 46
  - 2. 42
  - 3. 54
  - 4. 41

**Q.8** A man plans to travel a total distance of 60 km in 6 hours, covering part of the journey on foot and the rest by bicycle. His walking speed is 6 km/hr, and his cycling speed is 12 km/hr. How much distance (in km) does he cover on foot?

- Ans**
- 1. 14
  - 2. 16
  - 3. 15
  - 4. 12

**Q.9** A vendor bought 120 shirts at the rate of ₹375 per shirt and sold them for ₹48,600. What is his gain/loss percentage?

- Ans**
- 1. Gain 8%
  - 2. Loss 12%
  - 3. Loss 8%
  - 4. Gain 12%

**Q.10** If  $x$  varies directly to  $y$  and if  $x = 3$ ,  $y = 5$ , then find the value of  $y$  when  $x = 7.8$ .

- Ans**
- 1. 12
  - 2. 13
  - 3. 11
  - 4. 14

**Q.11** The price (per litre) of petrol increases by 40%. By what percent should its consumption be reduced such that the expenditure on it increases by 12% only?

- Ans**
- 1. 86%
  - 2. 20%
  - 3. 80%
  - 4. 18%

**Q.12** Mandar bought a calculator and sold it to Ketan at a profit of 5%. Ketan sold it to Tushar at a loss of 25%. If Tushar paid ₹3780, then the cost price (in ₹) of the calculator Mandar bought is

- Ans**
- 1. 4800
  - 2. 4550
  - 3. 4600
  - 4. 4950

**Q.13** If 4% of  $x = 120$ , then  $x$  is equal to:

- Ans**
- 1. 3100
  - 2. 3000
  - 3. 6100
  - 4. 6000

**Q.14** Amit invests a sum of ₹5400 and Gopal invests a sum of ₹10200 at the same rate of simple interest per annum. If, at the end of 4 years, Gopal gets ₹960 more interest than Amit, then find the rate of interest per annum (in percentage).

- Ans**
- 1. 3
  - 2. 5
  - 3. 7
  - 4. 4

Q.15 Find the effective discount for the scheme 'buy 10, get 6 free'.

- Ans
- 1. 60%
  - 2. 37.5%
  - 3. 73.5%
  - 4. 62.5%

Q.16 The average weight of Akshay, Atul and Baban is 46 kg. If the average weight of Akshay and Atul be 39 kg and that of Atul and Baban be 46 kg, then the weight of Atul (in kg) is:

- Ans
- 1. 42
  - 2. 52
  - 3. 32
  - 4. 47

Q.17 Mukund has two grandsons Sachin and Chetan. 13 year old Sachin gets some money from Mukund's wealth and 14 year old Chetan gets rest of the money. But Sachin and Chetan will get money only when they turn 23 years old. Till then the money is in a bank getting interest at rate 10% compounded annually. When both turn 23, they receive the same amount. How much had Mukund given Chetan (in ₹) initially, if total money with Mukund was ₹25200?

- Ans
- 1. 12000
  - 2. 11750
  - 3. 13200
  - 4. 13550

Q.18 Evaluate:  $32 \div 8 \times 3 - 2 \times 3$

- Ans
- 1. 6
  - 2. 8
  - 3. 9
  - 4. 5

Q.19 Find the area (in  $\text{cm}^2$ ) of the card board that is required to make a box of size 12 cm  $\times$  14 cm  $\times$  8 cm.

- Ans
- 1. 736
  - 2. 752
  - 3. 748
  - 4. 764

Q.20 The greatest number, which divides 711 and 1040 to leave 48 and 20 respectively as remainders, is:

- Ans
- 1. 71
  - 2. 32
  - 3. 63
  - 4. 51

Section : Part-D-English

Q.1 Select the most appropriate option to fill in the blank.

Atul lit the candle with a match. 'Match' here means \_\_\_\_\_.

- Ans
- 1. a contest in a game or sport
  - 2. a piece of decorative or protective material placed on the tip of a stick
  - 3. a short stick with a tip that ignites when rubbed on a rough surface
  - 4. a piece of stone

**Q.2** Select the most appropriate option to fill in the blank.

She anticipates \_\_\_\_\_ the reports done by Saturday.

- Ans**
- 1. has
  - 2. having
  - 3. making
  - 4. had

**Q.3** The following sentence has been split into four segments. Identify the segment that contains a grammatical error.

The flat up / is full of / an awful lot / of junk.

- Ans**
- 1. The flat up
  - 2. of junk
  - 3. is full of
  - 4. an awful lot

**Q.4** Select the most appropriate option to fill in the blank.

His presence of mind and \_\_\_\_\_ saved the life of the elderly woman.

- Ans**
- 1. audacity
  - 2. cowardice
  - 3. fear
  - 4. carelessness

**Q.5** Select the word that best completes the given sentence. Determine the collocation through the sentence.

Hari \_\_\_\_\_ advantage of the sale and bought three new shirts.

- Ans**
- 1. took
  - 2. saw
  - 3. set
  - 4. struck

**Q.6** Select the most appropriate idiom that can substitute the underlined segment in the given sentence.

Even though the project seemed overwhelming at first, we took it slowly and carefully and got it done in no time.

- Ans**
- 1. one step ahead
  - 2. one step at a time
  - 3. one step closer
  - 4. one step fix

**Q.7** Identify the INCORRECTLY spelt word in the following sentence.

The deligent student studied hard for the exam, earning a well-deserved top score on the test.

- Ans**
- 1. well-deserved
  - 2. deligent
  - 3. studied
  - 4. earning

**Q.8** Select the most appropriate ANTONYM of the given word.  
Dainty

- Ans**
- 1. Exquisite
  - 2. Graceful
  - 3. Cute
  - 4. Crude

**Q.9** In the sentence, 'The CEO's behaviour was impeccable', what is the ANTONYM of the word 'impeccable'?

- Ans**
- 1. Unblemished
  - 2. Spotless
  - 3. Faulty
  - 4. Perfect

**Q.10** Rectify the sentence by selecting the correctly spelt word from the options.

He was able to decipher the encoded messages with ease.

- Ans**
- 1. Decipher
  - 2. Deecipher
  - 3. Deciepher
  - 4. Deciipher

**Q.11** Identify the sentence with the INCORRECT usage of an adverb.

- Ans**
- 1. They delivered the package yesterday.
  - 2. He will send the documents later.
  - 3. She submitted the report today.
  - 4. Rohit completed already the project.

**Q.12** Select the most appropriate option that can substitute the underlined segment in the given sentence.

I will have one more of these delicious rasgullas.

- Ans**
- 1. both
  - 2. many
  - 3. either
  - 4. another

**Q.13** Select the most appropriate ANTONYM of the given word.

Sporadic

- Ans**
- 1. Scant
  - 2. National
  - 3. Aromatic
  - 4. Regular

**Q.14** Select the most appropriate ANTONYM of the given word.

Versatile

- Ans**
- 1. Limited
  - 2. Beautiful
  - 3. Optimistic
  - 4. Cruel

**Q.15** Based on the situation in the sentence, select the most appropriate idiom to fill in the blank.

Despite the criticism, the artist took it in stride and considered it \_\_\_\_\_.

- Ans**
- 1. break a leg
  - 2. as water under the bridge
  - 3. a chip on their shoulder
  - 4. a piece of cake

**Comprehension:**

In the following passage, some words have been deleted. Read the passage carefully and select the most appropriate option to fill in each blank.

Indigenous communities (1)\_\_\_\_\_ the world are facing some of the most severe climate impacts. Indigeneous communities are not only (2)\_\_\_\_\_ on their surrounding ecosystems for their lives and livelihoods; "but their identities are also (3)\_\_\_\_\_ deeply interwoven with the land and water. As a result, indigenous peoples (4)\_\_\_\_\_ efforts in climate change mitigation and adaptation across the globe. At the Center for Climate Justice, we (5)\_\_\_\_\_ relationships with indigenous communities by partnering with indigenous people.

**SubQuestion No : 16**

**Q.16** Select the most appropriate option to fill blank no. 1.

- Ans**
- 1. in
  - 2. around
  - 3. throughout
  - 4. of

**Comprehension:**

In the following passage, some words have been deleted. Read the passage carefully and select the most appropriate option to fill in each blank.

Indigenous communities (1)\_\_\_\_\_ the world are facing some of the most severe climate impacts. Indigeneous communities are not only (2)\_\_\_\_\_ on their surrounding ecosystems for their lives and livelihoods; "but their identities are also (3)\_\_\_\_\_ deeply interwoven with the land and water. As a result, indigenous peoples (4)\_\_\_\_\_ efforts in climate change mitigation and adaptation across the globe. At the Center for Climate Justice, we (5)\_\_\_\_\_ relationships with indigenous communities by partnering with indigenous people.

**SubQuestion No : 17**

**Q.17** Select the most appropriate option to fill in blank no. 2.

- Ans**
- 1. relevant
  - 2. relatable
  - 3. relational
  - 4. reliant

**Comprehension:**

In the following passage, some words have been deleted. Read the passage carefully and select the most appropriate option to fill in each blank.

Indigenous communities (1)\_\_\_\_\_ the world are facing some of the most severe climate impacts. Indigeneous communities are not only (2)\_\_\_\_\_ on their surrounding ecosystems for their lives and livelihoods; "but their identities are also (3)\_\_\_\_\_ deeply interwoven with the land and water. As a result, indigenous peoples (4)\_\_\_\_\_ efforts in climate change mitigation and adaptation across the globe. At the Center for Climate Justice, we (5)\_\_\_\_\_ relationships with indigenous communities by partnering with indigenous people.

**SubQuestion No : 18**

**Q.18** Select the most appropriate option to fill in blank no. 3.

- Ans**
- 1. only
  - 2. also
  - 3. seldom
  - 4. too

**Comprehension:**

In the following passage, some words have been deleted. Read the passage carefully and select the most appropriate option to fill in each blank.

Indigenous communities (1)\_\_\_\_\_ the world are facing some of the most severe climate impacts. Indigenous communities are not only (2)\_\_\_\_\_ on their surrounding ecosystems for their lives and livelihoods; "but their identities are also (3)\_\_\_\_\_ deeply interwoven with the land and water. As a result, indigenous peoples (4)\_\_\_\_\_ efforts in climate change mitigation and adaptation across the globe. At the Center for Climate Justice, we (5)\_\_\_\_\_ relationships with indigenous communities by partnering with indigenous people.

**SubQuestion No : 19**

**Q.19** Select the most appropriate option to fill in blank no. 4.

- Ans**
- 1. has leading
  - 2. was leading
  - 3. are leading
  - 4. have leading

**Comprehension:**

In the following passage, some words have been deleted. Read the passage carefully and select the most appropriate option to fill in each blank.

Indigenous communities (1)\_\_\_\_\_ the world are facing some of the most severe climate impacts. Indigenous communities are not only (2)\_\_\_\_\_ on their surrounding ecosystems for their lives and livelihoods; "but their identities are also (3)\_\_\_\_\_ deeply interwoven with the land and water. As a result, indigenous peoples (4)\_\_\_\_\_ efforts in climate change mitigation and adaptation across the globe. At the Center for Climate Justice, we (5)\_\_\_\_\_ relationships with indigenous communities by partnering with indigenous people.

**SubQuestion No : 20**

**Q.20** Select the most appropriate option to fill in blank no.5

- Ans**
- 1. imitate
  - 2. nominate
  - 3. nurture
  - 4. notice

**Section : Part-D-Hindi**

**Q.1** 'गोदान' प्रेमचंद की एक मशहूर \_\_\_\_\_ का नाम है ।' वाक्य के रिक्त स्थान के लिए उपयुक्त विदेशी शब्द है-

- Ans**
- 1. किताब
  - 2. ग्रंथ
  - 3. उपन्यास
  - 4. पुस्तक

**Q.2** 'स्वधर्म' का विलोम शब्द है-

- Ans**
- 1. अधम
  - 2. परधर्म
  - 3. अधर्म
  - 4. कुधर्म

**Q.3** निम्नलिखित में से अशुद्ध वाक्य का चयन कीजिए -

- Ans**
- 1. मेरे मित्र की पत्नी विद्वान् है ।
  - 2. सच बोलना मोहन की आदत है ।
  - 3. श्रेया की ससुराल जयपुर में है ।
  - 4. आत्मा अजर अमर होती है ।

Q.4 आपके विद्यालय में परिक्षा-परणाम कब तक घोषित होगा? 'परिक्षा-परणाम' के स्थान पर उचित शब्द होगा

- Ans
- 1. परीक्षा-परिणाम
  - 2. परिक्षा-परिणाम
  - 3. परीक्षा-परीणाम
  - 4. परिक्षा-परीणाम

Q.5 दिए गये वाक्य में रिक्त स्थान की पूर्ति उचित शब्द के द्वारा कीजिए – हिमालय \_\_\_\_\_ का राजा है।

- Ans
- 1. पर्वत माला
  - 2. पर्वत छोटी
  - 3. पर्वतों
  - 4. पर्वत

Q.6 निम्नलिखित वाक्यों में से शुद्ध वाक्य का चयन कीजिए- राकेश घर बनाया।

- Ans
- 1. राकेश का घर बनवाया।
  - 2. राकेश ने घर बनवाया।
  - 3. राकेश की घर बनवाया।
  - 4. राकेश से, घर बनाया।

Q.7 निम्नलिखित वाक्य के किस खंड में अशुद्धि है?

मैंने यह बात उनके द्वारा सुनी थी।

- Ans
- 1. बात
  - 2. मैंने
  - 3. उनके द्वारा
  - 4. सुनी

Q.8 \_\_\_\_\_ आदमी का इलाज किसी वैद्य ने नहीं किया।' वाक्य के रिक्त स्थान के लिए विदेशी शब्द चुनकर वाक्य पूर्ण कीजिए।

- Ans
- 1. गरीब
  - 2. निर्धन
  - 3. निराश
  - 4. मूर्छित

Q.9 'आराधना' का उपयुक्त एकार्थक शब्द है -

- Ans
- 1. तपस्या
  - 2. परिश्रम
  - 3. पढ़ाई
  - 4. प्रेम

Q.10 निम्नलिखित वाक्य में वर्तनी संबंधी त्रुटि की पहचान करें।

इस जगत के कन-कन में ईश्वर विद्यमान है।

- Ans
- 1. विद्यमान
  - 2. ईश्वर
  - 3. कन-कन
  - 4. जगत

Q.11 'प्रख्यात' का विलोम शब्द नहीं है-

- Ans
- 1. कुख्यात
  - 2. ख्यात
  - 3. प्रसिद्ध
  - 4. विख्यात

Q.12 जिसे समझना कठिन हो – वाक्यांश के लिए उपयुक्त शब्द का चयन करें।

- Ans
- 1. सुबोध
  - 2. सुगम
  - 3. दुर्गम
  - 4. दुर्बोध

Q.13 निम्नलिखित वाक्य के किस भाग में त्रुटि है?  
ग्रीष्मकालीन दिनों में अमराई में घूमना अत्यंत भला लगता है

- Ans
- 1. अत्यंत भला
  - 2. लगता है
  - 3. ग्रीष्मकालीन काल में
  - 4. अमराई में घूमना

Q.14 'किरण' का पर्याय निम्न में से है-

- Ans
- 1. रश्मि
  - 2. ईहा
  - 3. ज्योत्सना
  - 4. विद्युत

Q.15 नमन वैसे तो महामूर्ख है परंतु इस बार कक्षा में अव्वल आया है। इसे कहते हैं अंधे के सिर बटेर लगना।  
रेखांकित पद के स्थान पर उचित शब्द बताइए।

- Ans
- 1. दिमाग
  - 2. पैर
  - 3. गले
  - 4. हाथ

**Comprehension:**

गद्यांश के आधार पर प्रश्न का उत्तर दें।

बापू ने हमेशा धनाढ्य लोगों को इस बात के लिए (1)\_\_\_\_\_ किया कि वे अपनी मर्जी से जनहित के लिए उस मुनाफे में से व्यय करें जो वे अपने व्यवसाय से कमाते हैं। बापू की यह अवधारणा नैसर्गिक न्याय के (2)\_\_\_\_\_ थी। वे (3)\_\_\_\_\_ के प्राकृतिक सिद्धांत में विश्वास करते थे, जिसमें यह अवधारणा निहित थी कि प्रत्येक व्यक्ति उतना ही ले जो उसकी (4)\_\_\_\_\_ आवश्यकता हो। ऐसा नहीं है कि भारत के औद्योगिक (5)\_\_\_\_\_ ने जनहित की तरफ ध्यान न दिया हो।

**SubQuestion No : 16**

Q.16 उचित शब्द चुनकर गद्यांश में रिक्त स्थान (1) की पूर्ति करें-

- Ans
- 1. उद्वेलित
  - 2. प्रेरित
  - 3. संचालित
  - 4. निर्देशित

**Comprehension:**

गद्यांश के आधार पर प्रश्न का उत्तर दें।

बापू ने हमेशा धनाढ्य लोगों को इस बात के लिए (1)\_\_\_\_\_ किया कि वे अपनी मर्जी से जनहित के लिए उस मुनाफे में से व्यय करें जो वे अपने व्यवसाय से कमाते हैं। बापू की यह अवधारणा नैसर्गिक न्याय के (2)\_\_\_\_\_ थी। वे (3)\_\_\_\_\_ के प्राकृतिक सिद्धांत में विश्वास करते थे, जिसमें यह अवधारणा निहित थी कि प्रत्येक व्यक्ति उतना ही ले जो उसकी (4)\_\_\_\_\_ आवश्यकता हो। ऐसा नहीं है कि भारत के औद्योगिक (5)\_\_\_\_\_ ने जनहित की तरफ ध्यान न दिया हो।

**SubQuestion No : 17**

Q.17 उचित शब्द चुनकर गद्यांश में रिक्त स्थान (2) की पूर्ति करें-

- Ans
- 1. स्वरूप
  - 2. अनुरूप
  - 3. प्रतिकूल
  - 4. समान

**Comprehension:**

गद्यांश के आधार पर प्रश्न का उत्तर दें।

बापू ने हमेशा धनाढ्य लोगों को इस बात के लिए (1)\_\_\_\_\_ किया कि वे अपनी मर्जी से जनहित के लिए उस मुनाफे में से व्यय करें जो वे अपने व्यवसाय से कमाते हैं। बापू की यह अवधारणा नैसर्गिक न्याय के (2)\_\_\_\_\_ थी। वे (3)\_\_\_\_\_ के प्राकृतिक सिद्धांत में विश्वास करते थे, जिसमें यह अवधारणा निहित थी कि प्रत्येक व्यक्ति उतना ही ले जो उसकी (4)\_\_\_\_\_ आवश्यकता हो। ऐसा नहीं है कि भारत के औद्योगिक (5)\_\_\_\_\_ ने जनहित की तरफ ध्यान न दिया हो।

**SubQuestion No : 18**

Q.18 उचित शब्द चुनकर गद्यांश में रिक्त स्थान (3) की पूर्ति करें-

- Ans
- 1. परिवर्तन
  - 2. व्यवस्था
  - 3. विभाजन
  - 4. वितरण

**Comprehension:**

गद्यांश के आधार पर प्रश्न का उत्तर दें।

बापू ने हमेशा धनाढ्य लोगों को इस बात के लिए (1)\_\_\_\_\_ किया कि वे अपनी मर्जी से जनहित के लिए उस मुनाफे में से व्यय करें जो वे अपने व्यवसाय से कमाते हैं। बापू की यह अवधारणा नैसर्गिक न्याय के (2)\_\_\_\_\_ थी। वे (3)\_\_\_\_\_ के प्राकृतिक सिद्धांत में विश्वास करते थे, जिसमें यह अवधारणा निहित थी कि प्रत्येक व्यक्ति उतना ही ले जो उसकी (4)\_\_\_\_\_ आवश्यकता हो। ऐसा नहीं है कि भारत के औद्योगिक (5)\_\_\_\_\_ ने जनहित की तरफ ध्यान न दिया हो।

**SubQuestion No : 19**

Q.19 उचित शब्द चुनकर गद्यांश में रिक्त स्थान (4) की पूर्ति करें-

- Ans
- 1. समकालीन
  - 2. व्यक्तिगत
  - 3. प्रथम
  - 4. तात्कालिक

**Comprehension:**

गद्यांश के आधार पर प्रश्न का उत्तर दें।

बापू ने हमेशा धनाढ्य लोगों को इस बात के लिए (1)\_\_\_\_\_ किया कि वे अपनी मर्जी से जनहित के लिए उस मुनाफे में से व्यय करें जो वे अपने व्यवसाय से कमाते हैं। बापू की यह अवधारणा नैसर्गिक न्याय के (2)\_\_\_\_\_ थी। वे (3)\_\_\_\_\_ के प्राकृतिक सिद्धांत में विश्वास करते थे, जिसमें यह अवधारणा निहित थी कि प्रत्येक व्यक्ति उतना ही ले जो उसकी (4)\_\_\_\_\_ आवश्यकता हो। ऐसा नहीं है कि भारत के औद्योगिक (5)\_\_\_\_\_ ने जनहित की तरफ ध्यान न दिया हो।

**SubQuestion No : 20**

Q.20 उचित शब्द चुनकर गद्यांश में रिक्त स्थान (5) की पूर्ति करें-

- Ans
- 1. समाजों
  - 2. घरानों
  - 3. समूहों
  - 4. प्रतिष्ठानों