

Multi Tasking Non Technical Staff and Havaladar CBIC and CBN Examination 2023

Roll Number	
Candidate Name	
Venue Name	iON Digital Zone iDZ 2 Duhai
Exam Date	08/09/2023
Exam Time	12:30 PM - 2:30 PM
Subject	MTS Non Tech Havaladar CBIC and CBN Examination 2023

Section : Numerical and Mathematical Ability

Q.1 A boat covers a certain distance downstream in 5 hours but takes 8 hours to return upstream to the starting point. If the speed of the stream is 6 km/h, find the speed of the boat in still water.

- Ans
- ✓ 1. 26 km/h
 - ✗ 2. 13 km/h
 - ✗ 3. 78 km/h
 - ✗ 4. 39 km/h

Question ID : 264330153884

Option 1 ID : 264330603002

Option 2 ID : 264330603001

Option 3 ID : 264330602999

Option 4 ID : 264330603000

Status : Answered

Chosen Option : 1

Q.2 Three numbers are in the ratio 5 : 2 : 7. The sum of their squares is 3822. The biggest number is:

- Ans
- ✗ 1. 35
 - ✗ 2. 38
 - ✗ 3. 78
 - ✓ 4. 49

Question ID : 264330154047

Option 1 ID : 264330603654

Option 2 ID : 264330603651

Option 3 ID : 264330603653

Option 4 ID : 264330603652

Status : Answered

Chosen Option : 4

Q.3 A path of uniform width 2.5 m runs around the outside of a rectangular field of dimensions 45 m × 35 m. What is the area of the path (in m^2) ?

- Ans
- ☒ 1. 500
 - ☒ 2. 425
 - ☒ 3. 475
 - ☒ 4. 525

Question ID : 264330153787

Option 1 ID : 264330602612

Option 2 ID : 264330602613

Option 3 ID : 264330602614

Option 4 ID : 264330602611

Status : Answered

Chosen Option : 1

Q.4 In a certain time, a sum becomes 5 times at the rate of 6% per annum on simple interest. At what rate of interest, the same sum becomes 8 times in the same duration?

- Ans
- ☒ 1. 8.5%
 - ☒ 2. 10.5%
 - ☒ 3. 5.5%
 - ☒ 4. 12.5%

Question ID : 264330155747

Option 1 ID : 264330610393

Option 2 ID : 264330610392

Option 3 ID : 264330610394

Option 4 ID : 264330610391

Status : Answered

Chosen Option : 2

Q.5 Find the amount if ₹10,200 is invested at the rate of 8% per annum compound interest for $1\frac{1}{2}$ years when interest is compounded half yearly (up to two decimal places).

- Ans
- ☒ 1. ₹11,743.61
 - ☒ 2. ₹11,473.61
 - ☒ 3. ₹11,764.28
 - ☒ 4. ₹11,347.28

Question ID : 264330156363

Option 1 ID : 264330612854

Option 2 ID : 264330612852

Option 3 ID : 264330612853

Option 4 ID : 264330612851

Status : Answered

Chosen Option : 2

Q.6 In what ratio, rice costing ₹185 per kg be mixed with rice costing ₹95 per kg such that by selling the mixture at ₹140 per kg there is a gain of 40%?

- Ans**
- ☒ 1. 2 : 19
 - ☒ 2. 3 : 23
 - ☒ 3. 2 : 13
 - ☒ 4. 1 : 17

Question ID : 264330154079

Option 1 ID : 264330603779

Option 2 ID : 264330603780

Option 3 ID : 264330603782

Option 4 ID : 264330603781

Status : Answered

Chosen Option : 4

Q.7 Among four numbers the sum of the smallest and largest is 72 more than the sum of middle two numbers . If the numbers are in the ratio 6 : 7 : 15 : 19, then the smallest number is:

- Ans**
- ☒ 1. 72
 - ☒ 2. 144
 - ☒ 3. 168
 - ☒ 4. 216

Question ID : 264330154051

Option 1 ID : 264330603670

Option 2 ID : 264330603669

Option 3 ID : 264330603668

Option 4 ID : 264330603667

Status : Answered

Chosen Option : 3

Q.8 A man runs across an 1800 m long street in 6 min. Calculate his speed in m/sec.

- Ans**
- ☒ 1. 5
 - ☒ 2. 4
 - ☒ 3. 6
 - ☒ 4. 8

Question ID : 264330156111

Option 1 ID : 264330611843

Option 2 ID : 264330611845

Option 3 ID : 264330611844

Option 4 ID : 264330611846

Status : Answered

Chosen Option : 1

Q.9 The following marks are obtained by a student in five subjects.

Subjects	Marks
Geography	42
History	43
Civics	51
Hindi	54
CS	50

What is the difference between the minimum and maximum marks scored by the student?

- Ans**
- ☒ 1. 10
 - ☒ 2. 4
 - ☒ 3. 2
 - ☒ 4. 12

Question ID : 264330156536

Option 1 ID : 264330613533

Option 2 ID : 264330613534

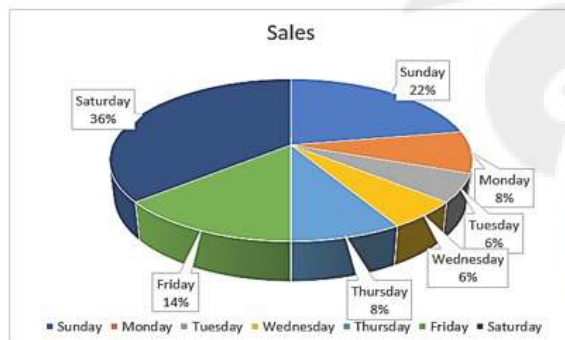
Option 3 ID : 264330613532

Option 4 ID : 264330613531

Status : Answered

Chosen Option : 4

Q.10 The sale of tickets (in thousands) in days of a week is given in the pie chart:



The combined angle made at the centre by which days is equal to the angle made by Saturday?

- Ans**
- ☒ 1. Sunday, Monday and Tuesday
 - ☒ 2. Tuesday, Wednesday and Thursday
 - ☒ 3. Monday, Tuesday and Wednesday
 - ☒ 4. Wednesday, Thursday and Friday

Question ID : 264330153823

Option 1 ID : 264330602758

Option 2 ID : 264330602756

Option 3 ID : 264330602755

Option 4 ID : 264330602757

Status : Answered

Chosen Option : 1

Q.11 A and B can do a piece of work in 6 and 12 days, respectively. If they work alternately and A begins the work, in how many days will the work be completed?

- Ans
- ☒ 1. 9
 - ☒ 2. 8
 - ☒ 3. $8\frac{1}{2}$
 - ☒ 4. $9\frac{1}{2}$

Question ID : 264330153855

Option 1 ID : 264330602883

Option 2 ID : 264330602885

Option 3 ID : 264330602886

Option 4 ID : 264330602884

Status : Answered

Chosen Option : 2

Q.12 A dealer buys some goods for ₹3,600. If the overhead expenses be 5% of the cost price, then at what price should it be sold to earn 15%?

- Ans
- ☒ 1. ₹4,347
 - ☒ 2. ₹4,734
 - ☒ 3. ₹4,437
 - ☒ 4. ₹4,743

Question ID : 264330159025

Option 1 ID : 264330623461

Option 2 ID : 264330623462

Option 3 ID : 264330623459

Option 4 ID : 264330623460

Status : Answered

Chosen Option : 1

Q.13 The income of a company increases 25% per annum. If its income is ₹26,64,000 in the year 1999 what was its income in the year 1997?

- Ans
- ☒ 1. ₹ 16,50,000
 - ☒ 2. ₹ 17,04,960
 - ☒ 3. ₹ 15,50,000
 - ☒ 4. ₹ 17,50,000

Question ID : 264330156072

Option 1 ID : 264330611689

Option 2 ID : 264330611688

Option 3 ID : 264330611690

Option 4 ID : 264330611687

Status : Answered

Chosen Option : 2

Q.14 The average of a batsman in 20 innings is 41 runs. In the next inning, he scored 41 runs. What will be his new average?

- Ans**
- ☐ 1. 39
 - ☒ 2. 41
 - ☐ 3. 38
 - ☐ 4. 36

Question ID : 264330156212

Option 1 ID : 264330612249

Option 2 ID : 264330612250

Option 3 ID : 264330612248

Option 4 ID : 264330612247

Status : Answered

Chosen Option : 2

Q.15 Aisha and Razia can complete a work in 50 days and 75 days, respectively. In how many days will the entire work be completed if both of them work together?

- Ans**
- ☐ 1. 32
 - ☐ 2. 25
 - ☒ 3. 30
 - ☐ 4. 28

Question ID : 264330155718

Option 1 ID : 264330610278

Option 2 ID : 264330610275

Option 3 ID : 264330610277

Option 4 ID : 264330610276

Status : Answered

Chosen Option : 3

Q.16 A man sold his cycle at 17% loss. If he had sold it for ₹1,056 more, he would have made 5% profit. The cost price of the cycle is:

- Ans**
- ☐ 1. ₹4,700
 - ☐ 2. ₹3,800
 - ☐ 3. ₹5,100
 - ☒ 4. ₹4,800

Question ID : 264330154080

Option 1 ID : 264330603784

Option 2 ID : 264330603783

Option 3 ID : 264330603785

Option 4 ID : 264330603786

Status : Answered

Chosen Option : 4

Q.17 Find the HCF of 230, 276, and 322.

- Ans
- ☐ 1. 23
 - ☐ 2. 12
 - ☒ 3. 46
 - ☐ 4. 14

Question ID : 264330156090

Option 1 ID : 264330611759

Option 2 ID : 264330611761

Option 3 ID : 264330611762

Option 4 ID : 264330611760

Status : Answered

Chosen Option : 3

Q.18 On simplifying the following expression, we get _____.

$$\frac{24\sqrt{45} - 16\sqrt{20} + \sqrt{245} - 47\sqrt{5}}{3\frac{1}{5} + 1\frac{2}{5} - 2\frac{1}{6} - 2\frac{1}{5} - 5\frac{2}{5} + 3\frac{1}{6}}$$

- Ans
- ☒ 1. 0
 - ☐ 2. 3
 - ☐ 3. 1
 - ☐ 4. 2

Question ID : 264330154114

Option 1 ID : 264330603922

Option 2 ID : 264330603919

Option 3 ID : 264330603921

Option 4 ID : 264330603920

Status : Answered

Chosen Option : 1

Q.19 The speed of a bus from station A to B is 55 km/h, and while coming back from station B to A, the speed of the bus is 95 km/h. The average speed (in km/h) of the bus during the whole journey is:

- Ans
- ☐ 1. $72\frac{1}{3}$
 - ☐ 2. $67\frac{1}{3}$
 - ☐ 3. $62\frac{2}{3}$
 - ☒ 4. $69\frac{2}{3}$

Question ID : 264330156512

Option 1 ID : 264330613438

Option 2 ID : 264330613435

Option 3 ID : 264330613436

Option 4 ID : 264330613437

Status : Answered

Chosen Option : 4

Q.20 What is the total surface area (in cm^2) of a right circular cone of radius 10.5 cm and slant height 13 cm? Take $\pi = \frac{22}{7}$

- Ans**
- ☒ 1. 577.5
 - ☒ 2. 757.5
 - ☒ 3. 775.5
 - ☒ 4. 787.5

Question ID : 264330153790

Option 1 ID : 264330602625

Option 2 ID : 264330602624

Option 3 ID : 264330602626

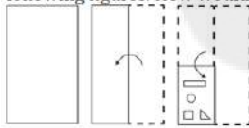
Option 4 ID : 264330602623

Status : Answered

Chosen Option : 3

Section : Reasoning Ability and Problem Solving

Q.1 The sequence of folding a piece of paper and the manner in which the folded paper is cut is shown in the following figures. How would this paper look when unfolded?



Ans

- ☒ 1.
- ☒ 2.
- ☒ 3.
- ☒ 4.

Question ID : 264330155606

Option 1 ID : 264330609830

Option 2 ID : 264330609828

Option 3 ID : 264330609829

Option 4 ID : 264330609827

Status : Answered

Chosen Option : 3

Q.2 In a certain code language, 'YOJ' is coded as 'BRM' and 'DSP' is coded as 'GVS'. What is the code for 'ZMC' in the given code language?

- Ans**
- ☒ 1. DQE
 - ☒ 2. CPF
 - ☒ 3. CQF
 - ☒ 4. DPG

Question ID : 264330155832

Option 1 ID : 264330610733

Option 2 ID : 264330610734

Option 3 ID : 264330610732

Option 4 ID : 264330610731

Status : Answered

Chosen Option : 2

Q.3 Read the given statement(s) and conclusions carefully. Assuming that the information given in the statements is true, even if it appears to be at variance with commonly known facts, decide which of the given conclusions logically follow(s) from the statement(s).

Statements: All the pencils are pens. All the pens are inks.

Conclusions:

(I) All the pencils are inks.

(II) Some inks are pencils.

- Ans**
- ☒ 1. Neither conclusion (I) nor (II) is follows.
 - ☒ 2. Both conclusions (I) and (II) are follows.
 - ☒ 3. Only conclusion (II) is follows.
 - ☒ 4. Only conclusion (I) is follows.

Question ID : 264330154427

Option 1 ID : 264330605173

Option 2 ID : 264330605174

Option 3 ID : 264330605172

Option 4 ID : 264330605171

Status : Answered

Chosen Option : 2

Q.4 If 'A' stands for '+', 'B' stands for '×', 'C' stands for '÷' and 'D' stands for '-', what will come in place of the question mark (?) in the following equation?
(54 A 9) C 34 D (10 B 3) C 46 D 16 = ?

- Ans**
- ☒ 1. 40
 - ☒ 2. 32
 - ☒ 3. 46
 - ☒ 4. 54

Question ID : 264330151793

Option 1 ID : 264330594801

Option 2 ID : 264330594800

Option 3 ID : 264330594799

Option 4 ID : 264330594802

Status : Answered

Chosen Option : 1

Q.5 Select the word-pair that best represents a similar relationship to the one expressed in the pair of words given below.

(The words must be considered as meaningful English words and must not be related to each other based on the number of letters/number of consonants/vowels in the word)

Correspond : Letters

- Ans** ✓ 1. Barter : Commodities
✗ 2. Trespass : Boundaries
✗ 3. Arbitrate : Controversies
✗ 4. Debate : Problems

Question ID : 264330154639

Option 1 ID : 264330606022

Option 2 ID : 264330606020

Option 3 ID : 264330606019

Option 4 ID : 264330606021

Status : Answered

Chosen Option : 2

Q.6 What should come in place of ? in the given series based on the English alphabetical order?

LVE, IUC, FTZ, CSW, ?

- Ans** ✓ 1. ZRT
✗ 2. ZQW
✗ 3. YSX
✗ 4. YQW

Question ID : 264330155790

Option 1 ID : 264330610565

Option 2 ID : 264330610566

Option 3 ID : 264330610563

Option 4 ID : 264330610564

Status : Answered

Chosen Option : 1

Q.7 What should come in place of '?' in the given series?

2 16 86 436 2186 ?

- Ans** ✗ 1. 10578
✗ 2. 11032
✗ 3. 11486
✓ 4. 10936

Question ID : 264330151463

Option 1 ID : 264330593479

Option 2 ID : 264330593481

Option 3 ID : 264330593482

Option 4 ID : 264330593480

Status : Answered

Chosen Option : 4

Q.8 In a certain code language, 'good vibes only' is coded as 'vn mj kl' and 'change is good' is coded as 'mj ro dh'. How is 'good' coded in the given language?

- Ans**
- ☒ 1. ro
 - ☒ 2. dh
 - ☒ 3. vn
 - ☒ 4. mj

Question ID : 264330151688

Option 1 ID : 264330594382

Option 2 ID : 264330594381

Option 3 ID : 264330594380

Option 4 ID : 264330594379

Status : Answered

Chosen Option : 4

Q.9 What should come in place of ? in the given series based on the English alphabetical order?

JAS, HDV, FGY, DJB, ?

- Ans**
- ☒ 1. DNE
 - ☒ 2. CNF
 - ☒ 3. BME
 - ☒ 4. CMG

Question ID : 264330155794

Option 1 ID : 264330610582

Option 2 ID : 264330610580

Option 3 ID : 264330610581

Option 4 ID : 264330610579

Status : Answered

Chosen Option : 3

Q.10 Which figure should replace the question mark (?) if the following figure series were to be continued?

△	G	S	S	7	B	2	△	7	7	S	G	
	B			△			G			2		?
	7			G			S			△		

Ans

✗ 1.

↑	△	7
	S	
	2	

✗ 2.

↑	7	S
	△	
	G	

✗ 3.

↑	7	S
	△	
	2	

✓ 4.

↑	2	S
	△	
	7	

Question ID : 264330154765

Option 1 ID : 264330606524

Option 2 ID : 264330606523

Option 3 ID : 264330606526

Option 4 ID : 264330606525

Status : Answered

Chosen Option : 4

Q.11 The position of how many letters will remain unchanged if each of the letter in the word 'DURATION' is arranged in alphabetical order?

Ans

✗ 1. Four

✓ 2. None

✗ 3. Five

✗ 4. One

Question ID : 264330154329

Option 1 ID : 264330604780

Option 2 ID : 264330604781

Option 3 ID : 264330604779

Option 4 ID : 264330604782

Status : Answered

Chosen Option : 2

Q.12 In the following number-pairs, the second number is obtained by applying certain mathematical operations to the first number. Select the set in which the numbers are related in the same way as are the numbers of the following sets.
(NOTE : Operations should be performed on the whole numbers, without breaking down the numbers into its constituent digits. E.g. 13 – Operations on 13 such as adding / subtracting / multiplying etc. to 13 can be performed. Breaking down 13 into 1 and 3 and then performing mathematical operations on 1 and 3 is not allowed)
2, 7
5, 16

- Ans
- ☒ 1. 14, 45
 - ☒ 2. 11, 23
 - ☒ 3. 20, 58
 - ☒ 4. 15, 46

Question ID : 264330151625
Option 1 ID : 264330594128
Option 2 ID : 264330594127
Option 3 ID : 264330594130
Option 4 ID : 264330594129
Status : Answered
Chosen Option : 4

Q.13 Select the combination of letters that when sequentially placed in the blanks of the given series, will complete the series.
J _ K _ K K J _ K _ _ K

- Ans
- ☒ 1. JJKJK
 - ☒ 2. KJKJK
 - ☒ 3. JKJKJ
 - ☒ 4. KJKJ

Question ID : 264330151645
Option 1 ID : 264330594209
Option 2 ID : 264330594208
Option 3 ID : 264330594210
Option 4 ID : 264330594207
Status : Answered
Chosen Option : 2

Q.14 Read the given statements and conclusions carefully. You have to take the given statements to be true even if they seem to be at variance from commonly known facts. You have to decide which conclusion/s logically follow/s from the given statements.

Statements: Some beds are telephones. All telephones are pillows. Some pillows are cupboards.

Conclusion I: Some pillows are telephones.

Conclusion II: Some beds are pillows.

- Ans
- ☒ 1. Both conclusions (I) and (II) are follow.
 - ☒ 2. Only conclusion (I) is follow.
 - ☒ 3. Neither conclusion (I) nor (II) is follow.
 - ☒ 4. Only conclusion (II) is follow.

Question ID : 264330155914
Option 1 ID : 264330611062
Option 2 ID : 264330611059
Option 3 ID : 264330611061
Option 4 ID : 264330611060
Status : Answered
Chosen Option : 1

Q.15 What should come in place of ? in the given series?

37 36 33 32 29 ?

Ans ☒ 1. 28

☐ 2. 26

☐ 3. 27

☐ 4. 24

Question ID : 264330151719

Option 1 ID : 264330594506

Option 2 ID : 264330594504

Option 3 ID : 264330594503

Option 4 ID : 264330594505

Status : Answered

Chosen Option : 1

Q.16 16 is related to 29 following a certain logic. Following the same logic, 85 is related to 98. To which of the following is 53 related to, following the same logic?

Ans ☒ 1. 66

☐ 2. 62

☐ 3. 64

☐ 4. 68

Question ID : 264330151594

Option 1 ID : 264330594005

Option 2 ID : 264330594003

Option 3 ID : 264330594004

Option 4 ID : 264330594006

Status : Answered

Chosen Option : 1

Q.17 What should come in place of '?' in the given series?

20 54 156 ? 1380 4134 12396

Ans ☐ 1. 506

☐ 2. 474

☐ 3. 358

☒ 4. 462

Question ID : 264330151448

Option 1 ID : 264330593422

Option 2 ID : 264330593421

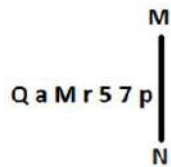
Option 3 ID : 264330593419

Option 4 ID : 264330593420

Status : Answered

Chosen Option : 4

Q.18 Select the correct mirror image of the given figure when the mirror is placed at MN as shown below.



- Ans
- ☒ 1. q 7 2 1 W e Q
 - ☒ 2. q 7 5 1 M a Q
 - ☒ 3. q 7 5 1 M 6 Q
 - ☒ 4. q 7 2 1 M 6 Q

Question ID : 264330151524

Option 1 ID : 264330593725

Option 2 ID : 264330593724

Option 3 ID : 264330593723

Option 4 ID : 264330593726

Status : Answered

Chosen Option : 4

Q.19 Abeer, Bela, Deepa, Farheen, Heera, and Girish are sitting around a circular table facing the centre. Girish sits 2nd to the right of Deepa. Farheen sits to the immediate left of Girish. Bela sits 2nd to the right of Farheen. Heera is an immediate neighbour of Deepa. Who sits to the immediate right of Bela?

- Ans
- ☒ 1. Girish
 - ☒ 2. Deepa
 - ☒ 3. Heera
 - ☒ 4. Abeer

Question ID : 264330155656

Option 1 ID : 264330610030

Option 2 ID : 264330610027

Option 3 ID : 264330610028

Option 4 ID : 264330610029

Status : Answered

Chosen Option : 4

Q.20 If F means '-', C means '×', D means '+', A means '÷', then what will come in place of the question mark (?) in the following equation?

$$65 \div A \cdot 39 \div D \cdot 3 \cdot F \cdot 23 \cdot C \cdot 2 = ?$$

- Ans
- ☒ 1. 64
 - ☒ 2. 32
 - ☒ 3. 56
 - ☒ 4. 42

Question ID : 264330154689

Option 1 ID : 264330606222

Option 2 ID : 264330606219

Option 3 ID : 264330606221

Option 4 ID : 264330606220

Status : Answered

Chosen Option : 2

Q.1 The 11th Fundamental Duty provides opportunities for education for the _____ age group of children.

- Ans ☒ 1. 6-14
☒ 2. 5-15
☒ 3. 2-11
☒ 4. 6-18

Question ID : 264330159901
Option 1 ID : 264330626952
Option 2 ID : 264330626954
Option 3 ID : 264330626953
Option 4 ID : 264330626951
Status : Answered
Chosen Option : 1

Q.2 As per the Census of India 2011, which Union Territory recorded the lowest population growth rate?

- Ans ☒ 1. Lakshadweep
☒ 2. Delhi
☒ 3. Daman and Diu
☒ 4. Chandigarh

Question ID : 264330161553
Option 1 ID : 264330633540
Option 2 ID : 264330633541
Option 3 ID : 264330633539
Option 4 ID : 264330633542
Status : Answered
Chosen Option : 1

Q.3 In which year were the Arms Act and Vernacular Press Act passed?

- Ans ☒ 1. 1878
☒ 2. 1879
☒ 3. 1877
☒ 4. 1876

Question ID : 264330160876
Option 1 ID : 264330630837
Option 2 ID : 264330630838
Option 3 ID : 264330630836
Option 4 ID : 264330630835
Status : Answered
Chosen Option : 4

Q.4 In which state of India is Kaziranga National Park located?

- Ans ☒ 1. Assam
☒ 2. Gujarat
☒ 3. Karnataka
☒ 4. West Bengal

Question ID : 264330161497
Option 1 ID : 264330633315
Option 2 ID : 264330633317
Option 3 ID : 264330633316
Option 4 ID : 264330633318
Status : Answered
Chosen Option : 1

Q.5 Whose autobiography is titled 'Ace against Odds'?

- Ans ☒ 1. Sania Mirza
☐ 2. Saina Nehwal
☐ 3. Mirabai Chanu
☐ 4. Mary Kom

Question ID : 264330155450

Option 1 ID : 264330609205

Option 2 ID : 264330609204

Option 3 ID : 264330609206

Option 4 ID : 264330609203

Status : Answered

Chosen Option : 1

Q.6 By what name are the flat membrane-enclosed sacs present in the Golgi apparatus known?

- Ans ☐ 1. Lamellae
☒ 2. Cisternae
☐ 3. Cristae
☐ 4. Stroma

Question ID : 264330161083

Option 1 ID : 264330631663

Option 2 ID : 264330631664

Option 3 ID : 264330631665

Option 4 ID : 264330631666

Status : Answered

Chosen Option : 2

Q.7 The Swarna Jayanti Shahari Rojgar Yojana (SJSRY) was launched in the year _____ by Government of India.

- Ans ☐ 1. 1990
☒ 2. 1997
☐ 3. 2010
☐ 4. 2004

Question ID : 264330161574

Option 1 ID : 264330633623

Option 2 ID : 264330633624

Option 3 ID : 264330633626

Option 4 ID : 264330633625

Status : Answered

Chosen Option : 4

Q.8 Manna Dey was a famous personality of India in the field of _____.

- Ans
- ☒ 1. Science
 - ☒ 2. Games
 - ☒ 3. Politics
 - ☒ 4. Music

Question ID : 264330155512

Option 1 ID : 264330609453

Option 2 ID : 264330609454

Option 3 ID : 264330609452

Option 4 ID : 264330609451

Status : Answered

Chosen Option : 4

Q.9 'Chapchar Kut' is a festival from the state of _____. It is celebrated during March after the completion of the most arduous task of Jhum operation i.e., jungle clearing (clearing of the remnants of burning).

- Ans
- ☒ 1. Mizoram
 - ☒ 2. Nagaland
 - ☒ 3. Jharkhand
 - ☒ 4. Chhattisgarh

Question ID : 264330160822

Option 1 ID : 264330630622

Option 2 ID : 264330630619

Option 3 ID : 264330630620

Option 4 ID : 264330630621

Status : Not Answered

Chosen Option : --

Q.10 In which event at the 2023 ISSF Junior World Cup Championships did Amanpreet Singh win a gold medal for India?

- Ans
- ☒ 1. Men's 10 m air rifle
 - ☒ 2. Men's 10 m air pistol team
 - ☒ 3. Men's 25 m pistol
 - ☒ 4. Men's 25 m rapid fire pistol

Question ID : 264330161141

Option 1 ID : 264330631896

Option 2 ID : 264330631898

Option 3 ID : 264330631895

Option 4 ID : 264330631897

Status : Answered

Chosen Option : 3

Q.11 In which of the following States was the 2023 World Squash Championship held?

- Ans ☒ 1. Kerala
☒ 2. Tamil Nadu
☒ 3. Odisha
☒ 4. Karnataka

Question ID : 264330161143
Option 1 ID : 264330631906
Option 2 ID : 264330631905
Option 3 ID : 264330631904
Option 4 ID : 264330631903
Status : Answered
Chosen Option : 4

Q.12 Mumtaz Khan was named 'FIH Women's Rising Star of the Year' in 2022. She plays which of the following sports?

- Ans ☒ 1. Hockey
☒ 2. Fencing
☒ 3. Football
☒ 4. High Jump

Question ID : 264330158360
Option 1 ID : 264330620800
Option 2 ID : 264330620802
Option 3 ID : 264330620799
Option 4 ID : 264330620801
Status : Answered
Chosen Option : 2

Q.13 Which of the following is a common financial service provided by Micro Finance Institutions?

- Ans ☒ 1. Mortgage loans for luxury homes
☒ 2. Investment advisory services for high-net-worth individuals
☒ 3. Credit card issuance
☒ 4. Small loans to low-income individuals for entrepreneurial activities

Question ID : 264330157286
Option 1 ID : 264330616508
Option 2 ID : 264330616510
Option 3 ID : 264330616507
Option 4 ID : 264330616509
Status : Answered
Chosen Option : 4

Q.14 The Rathwas, who dwell in the state of _____, perform the Rathwa dance on the occasion of Holi (festival of colours).

- Ans ☒ 1. Andhra Pradesh
☒ 2. Telangana
☒ 3. Maharashtra
☒ 4. Gujarat

Question ID : 264330160800
Option 1 ID : 264330630532
Option 2 ID : 264330630534
Option 3 ID : 264330630531
Option 4 ID : 264330630533
Status : Answered
Chosen Option : 2

Q.15 Which Article of the Constitution of India provides for a governor for each state?

- Ans
- ☐ 1. Article 173
 - ☐ 2. Article 157
 - ☒ 3. Article 153
 - ☐ 4. Article 156

Question ID : 264330161294

Option 1 ID : 264330632506

Option 2 ID : 264330632505

Option 3 ID : 264330632503

Option 4 ID : 264330632504

Status : Answered

Chosen Option : 2

Q.16 Who was the first Woman President of Indian National Congress?

- Ans
- ☐ 1. Sarojini Naidu
 - ☐ 2. Asaf Ali
 - ☒ 3. Annie Besant
 - ☐ 4. Usha Mehta

Question ID : 264330162342

Option 1 ID : 264330636695

Option 2 ID : 264330636697

Option 3 ID : 264330636698

Option 4 ID : 264330636696

Status : Answered

Chosen Option : 3

Q.17 _____ was a star of the Kathak dance form described as 'Nritya Samragini' (the empress of dance) by Rabindranath Tagore.

- Ans
- ☒ 1. Sitara Devi
 - ☐ 2. Rukmini Devi Arundale
 - ☐ 3. Mrinalini Sarabhai
 - ☐ 4. Mallika Sarabhai

Question ID : 264330160811

Option 1 ID : 264330630577

Option 2 ID : 264330630575

Option 3 ID : 264330630578

Option 4 ID : 264330630576

Status : Answered

Chosen Option : 4

Q.18 Which of the following methods is used to calculate national income by summing up the total spending on final goods and services in an economy?

- Ans
- ☐ 1. Value-added method
 - ☐ 2. Output method
 - ☒ 3. Expenditure method
 - ☐ 4. Income method

Question ID : 264330157316

Option 1 ID : 264330616630

Option 2 ID : 264330616629

Option 3 ID : 264330616628

Option 4 ID : 264330616627

Status : Answered

Chosen Option : 3

Q.19 Former Governor of Jharkhand from the year 2004 to 2009, _____, passed away in Lucknow in 2022.

- Ans
- ☒ 1. Ramesh Bais
 - ☒ 2. Syed Ahmed
 - ☒ 3. Syed Sibtey Razi
 - ☒ 4. Kateekal Sankaranarayanan

Question ID : 264330161405

Option 1 ID : 264330632950

Option 2 ID : 264330632949

Option 3 ID : 264330632948

Option 4 ID : 264330632947

Status : Answered

Chosen Option : 2

Q.20 According to the IUPAC nomenclature system, which functional group is characterised by the presence of a -OH group, usually in a water-like bent shape?

- Ans
- ☒ 1. Carbonyls
 - ☒ 2. Amines
 - ☒ 3. Alcohols
 - ☒ 4. Esters

Question ID : 264330161051

Option 1 ID : 264330631536

Option 2 ID : 264330631538

Option 3 ID : 264330631535

Option 4 ID : 264330631537

Status : Answered

Chosen Option : 1

Q.21 Ajmer Sharif is the shrine of which of the following Sufi saints?

- Ans
- ☒ 1. Mohammad Ghori
 - ☒ 2. Mohammad Bin Tughlaq
 - ☒ 3. Khwaja Moinuddin Chishti
 - ☒ 4. Bhaktiyar Khilji

Question ID : 264330160765

Option 1 ID : 264330630394

Option 2 ID : 264330630391

Option 3 ID : 264330630393

Option 4 ID : 264330630392

Status : Answered

Chosen Option : 3

Q.22 Whose autobiography is titled as 'Wings of Fire: An Autobiography'?

- Ans ☒ 1. E Sreedharan
☒ 2. APJ Abdul Kalam
☒ 3. Rajender Singh
☒ 4. Satyabhama Das Biju

Question ID : 264330155446

Option 1 ID : 264330609188

Option 2 ID : 264330609187

Option 3 ID : 264330609189

Option 4 ID : 264330609190

Status : Answered

Chosen Option : 2

Q.23 Which of the following Carnatic musicians was the first to receive the Bharat Ratna?

- Ans ☒ 1. Tyagaraja
☒ 2. MS Subbulakshmi
☒ 3. Syama Sastri
☒ 4. KJ Yesudas

Question ID : 264330161767

Option 1 ID : 264330634398

Option 2 ID : 264330634395

Option 3 ID : 264330634397

Option 4 ID : 264330634396

Status : Answered

Chosen Option : 2

Q.24 Which of the following is the highest navigable lake in the world?

- Ans ☒ 1. Huron
☒ 2. Titicaca
☒ 3. Superior
☒ 4. Como

Question ID : 264330161324

Option 1 ID : 264330632625

Option 2 ID : 264330632624

Option 3 ID : 264330632623

Option 4 ID : 264330632626

Status : Answered

Chosen Option : 2

Q.25 Rukmini Devi Arundale was associated with which Indian classical dance form?

- Ans
- ☐ 1. Manipuri
 - ☐ 2. Kathak
 - ☒ 3. Bharatanatyam
 - ☐ 4. Mohiniyattam

Question ID : 264330155520
Option 1 ID : 264330609485
Option 2 ID : 264330609486
Option 3 ID : 264330609483
Option 4 ID : 264330609484
Status : Answered
Chosen Option : 3

Section : English Language and Comprehension

Q.1 Select the option that rectifies the spelling of the underlined word in the given sentence.

He felt priviledged to have received the country's greatest honour.

- Ans
- ☐ 1. previllaged
 - ☒ 2. privileged
 - ☐ 3. privilegede
 - ☐ 4. privilaged

Question ID : 264330153225
Option 1 ID : 264330600460
Option 2 ID : 264330600461
Option 3 ID : 264330600459
Option 4 ID : 264330600462
Status : Answered
Chosen Option : 2

Q.2 Select the option that can be used as a one-word substitute for the underlined segment in the following sentence.

Hundreds of people were removed from a place by the government recently due to a war-like situation.

- Ans
- ☐ 1. assassinated
 - ☒ 2. evacuated
 - ☐ 3. invaded
 - ☐ 4. terminated

Question ID : 264330152716
Option 1 ID : 264330598466
Option 2 ID : 264330598464
Option 3 ID : 264330598465
Option 4 ID : 264330598463
Status : Answered
Chosen Option : 2

Q.3 Select the most appropriate meaning of the underlined idiom in the following sentence.

Buying a home in the city centre will cost you an arm and a leg.

- Ans ☒ 1. Nothing extra
☒ 2. A large amount of money
☒ 3. A small amount of money
☒ 4. Physical pain

Question ID : 264330153048

Option 1 ID : 264330599762

Option 2 ID : 264330599760

Option 3 ID : 264330599759

Option 4 ID : 264330599761

Status : Answered

Chosen Option : 2

Q.4 Select the option that can be used as a one-word substitute for the given group of words.

One who has love for mankind

OR

One who makes an active effort to promote human welfare

- Ans ☒ 1. Philosopher
☒ 2. Patriot
☒ 3. Autocrat
☒ 4. Philanthropist

Question ID : 264330153554

Option 1 ID : 264330601716

Option 2 ID : 264330601717

Option 3 ID : 264330601718

Option 4 ID : 264330601715

Status : Answered

Chosen Option : 4

Q.5 Select the most appropriate meaning of the given idiom.
From scratch

- Ans ☒ 1. From a skin disease
☒ 2. From the beginning
☒ 3. From utter disorder
☒ 4. From death

Question ID : 264330156173

Option 1 ID : 264330612091

Option 2 ID : 264330612094

Option 3 ID : 264330612092

Option 4 ID : 264330612093

Status : Answered

Chosen Option : 2

Q.6 The following sentence has been divided into four parts. Identify the part that contains an error.

(A) Four divided by / (B) two is coming / (C) out to / (D) be two.

- Ans
- ☒ 1. D
 - ☒ 2. C
 - ☒ 3. B
 - ☒ 4. A

Question ID : 264330152628

Option 1 ID : 264330598118

Option 2 ID : 264330598117

Option 3 ID : 264330598116

Option 4 ID : 264330598115

Status : Answered

Chosen Option : 3

Q.7 Select the most appropriate meaning of the underlined idiom.

The detective went the whole nine yards in his investigation.

- Ans
- ☒ 1. Measuring every step
 - ☒ 2. Everything, all the way
 - ☒ 3. Close affinity with the law
 - ☒ 4. Taking the distant call

Question ID : 264330153147

Option 1 ID : 264330600148

Option 2 ID : 264330600150

Option 3 ID : 264330600149

Option 4 ID : 264330600147

Status : Answered

Chosen Option : 2

Q.8 Select the most appropriate option to fill in the blank.

Many soldiers marched in _____ at the international border.

- Ans
- ☒ 1. dress
 - ☒ 2. uniform
 - ☒ 3. fabric
 - ☒ 4. clothes

Question ID : 264330152583

Option 1 ID : 264330597935

Option 2 ID : 264330597937

Option 3 ID : 264330597938

Option 4 ID : 264330597936

Status : Answered

Chosen Option : 2

Q.9 The following sentence has been split into four segments. Identify the segment that contains a grammatical error.

This scripture / has been /translated in / seventy languages.

- Ans
- ☒ 1. seventy languages
 - ☒ 2. This scripture
 - ☒ 3. has been
 - ☒ 4. translated in

Question ID : 264330155431
Option 1 ID : 264330609134
Option 2 ID : 264330609131
Option 3 ID : 264330609132
Option 4 ID : 264330609133
Status : Answered
Chosen Option : 4

Q.10 Select the sentence that has NO spelling errors.

- Ans
- ☒ 1. The elderly woman was delighted to receive a bouquet of fragrant flowers from her thoughtful grandson, who had come to visit her at the nursing home
 - ☒ 2. The elderly woman was delighted to receive a bouque of fragrant flowers from her thoughtfull grandson, who had come to visit her at the nursing home
 - ☒ 3. The elderly woman was deligted to receive a bouque of fregrant flowers from her thoughtful grandson, who had come to visit her at the nursing home
 - ☒ 4. The elderly woman was delighed to recive a bouquet of fragrant flowers from her thoughtfull grandson, who had come to visit her at the nursing home

Question ID : 264330152648
Option 1 ID : 264330598196
Option 2 ID : 264330598198
Option 3 ID : 264330598195
Option 4 ID : 264330598197
Status : Answered
Chosen Option : 1

Q.11 Select the most appropriate option to fill in the blank.

She was known for her _____ attention to detail, always making sure everything was perfectly organised and in its proper place.

- Ans
- ☒ 1. fastidious
 - ☒ 2. scornful
 - ☒ 3. tedious
 - ☒ 4. exact

Question ID : 264330151863
Option 1 ID : 264330595073
Option 2 ID : 264330595072
Option 3 ID : 264330595071
Option 4 ID : 264330595074
Status : Answered
Chosen Option : 4

Q.12 Select the option that can be used as a one-word substitute for the given group of words.

The killing of a king

- Ans** ☒ 1. Regicide
 ☐ 2. Fratricide
 ☐ 3. Sororicide
 ☐ 4. Patricide

Question ID : 264330151868
Option 1 ID : 264330595091
Option 2 ID : 264330595094
Option 3 ID : 264330595092
Option 4 ID : 264330595093
Status : Answered
Chosen Option : 1

Q.13 Select the most appropriate option to fill in the blanks.
(Ø = No article)

____ doctor suggested doing some eye exercises and wearing ____ pair of powered glasses.

- Ans** ☐ 1. A; a
 ☐ 2. Ø; a
 ☐ 3. A; Ø
 ☒ 4. The; a

Question ID : 264330151329
Option 1 ID : 264330592945
Option 2 ID : 264330592944
Option 3 ID : 264330592946
Option 4 ID : 264330592943
Status : Answered
Chosen Option : 1

Q.14 Parts of the following sentence have been given as options. Select the option that contains an error.

They have less books than I have.

- Ans** ☐ 1. I have
 ☐ 2. They have
 ☐ 3. than
 ☒ 4. less books

Question ID : 264330152802
Option 1 ID : 264330598802
Option 2 ID : 264330598799
Option 3 ID : 264330598801
Option 4 ID : 264330598800
Status : Answered
Chosen Option : 4

Q.15 Select the most appropriate meaning of the given idiom.
Into hot water

- Ans**
- ☒ 1. Not on good terms
 - ☒ 2. In favour with
 - ☒ 3. Came to nothing
 - ☒ 4. Into trouble

Question ID : 264330152574

Option 1 ID : 264330597899

Option 2 ID : 264330597901

Option 3 ID : 264330597902

Option 4 ID : 264330597900

Status : Answered

Chosen Option : 4

Q.16 Select the most appropriate synonym of the bracketed word in the following sentence to fill in the blank.
The sun was setting over the mountains, painting the sky with _____(energetic) shades of orange and pink.

- Ans**
- ☒ 1. vibrant
 - ☒ 2. reactive
 - ☒ 3. faded
 - ☒ 4. bright

Question ID : 264330152661

Option 1 ID : 264330598247

Option 2 ID : 264330598250

Option 3 ID : 264330598248

Option 4 ID : 264330598249

Status : Answered

Chosen Option : 1

Q.17 The following sentence has been split into four segments. Identify the segment that contains an error.
She was writing / a letter to her grandmother / when the power / gone out.

- Ans**
- ☒ 1. gone out
 - ☒ 2. a letter to her grandmother
 - ☒ 3. She was writing
 - ☒ 4. when the power

Question ID : 264330155319

Option 1 ID : 264330608718

Option 2 ID : 264330608716

Option 3 ID : 264330608715

Option 4 ID : 264330608717

Status : Answered

Chosen Option : 1

Q.18 Select the most appropriate **ANTONYM** of the given word.
Nonchalant

- Ans** ☒ 1. Flexible
☒ 2. Caring
☒ 3. Marvellous
☒ 4. Covert

Question ID : 264330153539

Option 1 ID : 264330601661

Option 2 ID : 264330601660

Option 3 ID : 264330601662

Option 4 ID : 264330601659

Status : Answered

Chosen Option : 4

Q.19 Select the most appropriate synonym of the given word.
Grief

- Ans** ☒ 1. Pleasure
☒ 2. Jollity
☒ 3. Pain
☒ 4. Content

Question ID : 264330151821

Option 1 ID : 264330594911

Option 2 ID : 264330594914

Option 3 ID : 264330594912

Option 4 ID : 264330594913

Status : Answered

Chosen Option : 3

Q.20 There is a spelling error in the given sentence. Select the option that contains the **INCORRECTLY** spelt word.
The profesor's niece was planning a pleasant surprise for him.

- Ans** ☒ 1. profesor
☒ 2. planning
☒ 3. pleasant
☒ 4. niece

Question ID : 264330152835

Option 1 ID : 264330598931

Option 2 ID : 264330598933

Option 3 ID : 264330598934

Option 4 ID : 264330598932

Status : Answered

Chosen Option : 1

Comprehension:

In the following passage, some words have been deleted. Read the passage carefully and select the most appropriate option to fill in each blank.

Tim Cook, CEO of Apple who has recently _____ (1) India, has some _____ (2) for parents: limit the screen time for children. He says: "Kids are born _____ (3), they're digital kids now. And it is, I think, important to set some hard rails around it." Various surveys of Indian children show alarming findings. A Saurashtra University survey of _____ (4) a thousand children and their parents in Rajkot finds that 92% students prefer playing mobile games over playing outside and 78% students _____ (5) to having their phone while having meals. In another survey by Local Circles, nearly 55% of parents admit that their children aged 9-13 have access to a smartphone throughout the day.

SubQuestion No : 21

Q.21 Select the most appropriate option to fill in blank number 1.

- Ans ☒ 1. visiting
☒ 2. visited
☒ 3. visit
☒ 4. visits

Question ID : 264330152760

Option 1 ID : 264330598637

Option 2 ID : 264330598636

Option 3 ID : 264330598635

Option 4 ID : 264330598638

Status : Answered

Chosen Option : 2

Comprehension:

In the following passage, some words have been deleted. Read the passage carefully and select the most appropriate option to fill in each blank.

Tim Cook, CEO of Apple who has recently _____ (1) India, has some _____ (2) for parents: limit the screen time for children. He says: "Kids are born _____ (3), they're digital kids now. And it is, I think, important to set some hard rails around it." Various surveys of Indian children show alarming findings. A Saurashtra University survey of _____ (4) a thousand children and their parents in Rajkot finds that 92% students prefer playing mobile games over playing outside and 78% students _____ (5) to having their phone while having meals. In another survey by Local Circles, nearly 55% of parents admit that their children aged 9-13 have access to a smartphone throughout the day.

SubQuestion No : 22

Q.22 Select the most appropriate option to fill in blank number 2.

- Ans ☒ 1. suggesting
☒ 2. advise
☒ 3. suggest
☒ 4. advice

Question ID : 264330152761

Option 1 ID : 264330598642

Option 2 ID : 264330598639

Option 3 ID : 264330598641

Option 4 ID : 264330598640

Status : Answered

Chosen Option : 4

Comprehension:

In the following passage, some words have been deleted. Read the passage carefully and select the most appropriate option to fill in each blank.

Tim Cook, CEO of Apple who has recently _____ (1) India, has some _____ (2) for parents: limit the screen time for children. He says: "Kids are born _____ (3), they're digital kids now. And it is, I think, important to set some hard rails around it." Various surveys of Indian children show alarming findings. A Saurashtra University survey of _____ (4) a thousand children and their parents in Rajkot finds that 92% students prefer playing mobile games over playing outside and 78% students _____ (5) to having their phone while having meals. In another survey by Local Circles, nearly 55% of parents admit that their children aged 9-13 have access to a smartphone throughout the day.

SubQuestion No : 23

Q.23 Select the most appropriate option to fill in blank number 3.

- Ans
- ☒ 1. digitally
 - ☒ 2. digitalise
 - ☒ 3. digital
 - ☒ 4. digitalised

Question ID : 264330152762

Option 1 ID : 264330598644

Option 2 ID : 264330598645

Option 3 ID : 264330598643

Option 4 ID : 264330598646

Status : Answered

Chosen Option : 4

Comprehension:

In the following passage, some words have been deleted. Read the passage carefully and select the most appropriate option to fill in each blank.

Tim Cook, CEO of Apple who has recently _____ (1) India, has some _____ (2) for parents: limit the screen time for children. He says: "Kids are born _____ (3), they're digital kids now. And it is, I think, important to set some hard rails around it." Various surveys of Indian children show alarming findings. A Saurashtra University survey of _____ (4) a thousand children and their parents in Rajkot finds that 92% students prefer playing mobile games over playing outside and 78% students _____ (5) to having their phone while having meals. In another survey by Local Circles, nearly 55% of parents admit that their children aged 9-13 have access to a smartphone throughout the day.

SubQuestion No : 24

Q.24 Select the most appropriate option to fill in blank number 4.

- Ans
- ☒ 1. closer than
 - ☒ 2. bigger than
 - ☒ 3. above than
 - ☒ 4. more than

Question ID : 264330152763

Option 1 ID : 264330598650

Option 2 ID : 264330598649

Option 3 ID : 264330598647

Option 4 ID : 264330598648

Status : Answered

Chosen Option : 4

Comprehension:

In the following passage, some words have been deleted. Read the passage carefully and select the most appropriate option to fill in each blank.

Tim Cook, CEO of Apple who has recently _____ (1) India, has some _____ (2) for parents: limit the screen time for children. He says: "Kids are born _____ (3), they're digital kids now. And it is, I think, important to set some hard rails around it." Various surveys of Indian children show alarming findings. A Saurashtra University survey of _____ (4) a thousand children and their parents in Rajkot finds that 92% students prefer playing mobile games over playing outside and 78% students _____ (5) to having their phone while having meals. In another survey by Local Circles, nearly 55% of parents admit that their children aged 9-13 have access to a smartphone throughout the day.

SubQuestion No : 25

Q.25 Select the most appropriate option to fill in blank number 5.

- Ans**
- ☐ 1. habituated
 - ☐ 2. habituating
 - ☐ 3. will be habituating
 - ☒ 4. are habituated

Question ID : **264330152764**

Option 1 ID : **264330598653**

Option 2 ID : **264330598652**

Option 3 ID : **264330598651**

Option 4 ID : **264330598654**

Status : **Answered**

Chosen Option : **4**