

Stenographer Grade C and D Examination 2023

Roll Number	
Candidate Name	
Venue Name	
Exam Date	12/10/2023
Exam Time	9:00 AM - 11:00 AM
Subject	Stenographer Grade C and D Examination 2023

Section : General Intelligence and Reasoning

Q.1 Select the correct option that indicates the arrangement of the following words in a logical and meaningful order.

1. Senior secondary school
2. Primary school
3. Secondary school
4. Kindergarten
5. College

Ans ☒ 1. 4, 2, 3, 1, 5

☒ 2. 4, 3, 2, 5, 1

☒ 3. 2, 4, 3, 1, 5

☒ 4. 4, 3, 2, 1, 5

Question ID : 264330132910

Option 1 ID : 264330520702

Option 2 ID : 264330520699

Option 3 ID : 264330520701

Option 4 ID : 264330520700

Status : Answered

Chosen Option : 1

Q.2 Which figure should replace the question mark (?) in the following series to continue the pattern?

♥	3	Z	7	T	3	B	7	Z	0	T	7	
	B			♥			3			B		?
7	T	0	B	0	Z	0	T	♥	3	♥	Z	

Ans

✗ 1.

3	♥	0
	T	
Z	B	7

✗ 2.

7	Z	B
	0	
T	3	♥

✗ 3.

T	♥	Z
	7	
0	3	B

✓ 4.

3	0	Z
	7	
♥	T	B

Question ID : 264330129597
Option 1 ID : 264330507756
Option 2 ID : 264330507755
Option 3 ID : 264330507757
Option 4 ID : 264330507754
Status : Answered
Chosen Option : 4

Q.3 In a certain code language, 'EXIST' is written as 'FYHTU' and 'ABOVE' is written as 'BCNWF'. How will 'WORLD' be written in that language?

- Ans
- ✗ 1. YPQNE
 - ✓ 2. XPQME
 - ✗ 3. XPRNF
 - ✗ 4. YQQME

Question ID : 26433080703
Option 1 ID : 264330316747
Option 2 ID : 264330316746
Option 3 ID : 264330316745
Option 4 ID : 264330316748
Status : Answered
Chosen Option : 2

Q.4 Select the set in which the numbers are related in the same way as are the numbers of the given sets.

(NOTE : Operations should be performed on the whole numbers, without breaking down the numbers into its constituent digits. E.g. 13 – Operations on 13 such as adding /subtracting/multiplying etc. to 13 can be performed. Breaking down 13 into 1 and 3 and then performing mathematical operations on 1 and 3 is NOT allowed)
(30, 625, 5)
(20, 225, 5)

Ans ☒ 1. (19, 122, 7)

☒ 2. (32, 280, 5)

☒ 3. (21, 297, 6)

☒ 4. (24, 256, 8)

Question ID : 26433083123

Option 1 ID : 264330326325

Option 2 ID : 264330326327

Option 3 ID : 264330326326

Option 4 ID : 264330326328

Status : Answered

Chosen Option : 4

Q.5 'F + R' means 'F is the mother of R'
'F – R' means 'F is the father of R'
'F ÷ R' means 'F is the husband of R'
'F × R' means 'F is the daughter of R'
If 'A ÷ C × B + Q – Z', how is Q related to A?

Ans ☒ 1. Sister

☒ 2. Wife's brother

☒ 3. Father

☒ 4. Father's Father

Question ID : 264330102468

Option 1 ID : 264330402301

Option 2 ID : 264330402303

Option 3 ID : 264330402304

Option 4 ID : 264330402302

Status : Answered

Chosen Option : 2

Q.6 Which of the following interchange of numbers (not digits) would make the given equation correct?

$$14 \times 4 \div 10 + 10 - 20 = 2$$

Ans ☒ 1. 4, 20

☒ 2. 2, 10

☒ 3. 2, 14

☒ 4. 10, 20

Question ID : 264330144862

Option 1 ID : 264330567704

Option 2 ID : 264330567705

Option 3 ID : 264330567703

Option 4 ID : 264330567706

Status : Answered

Chosen Option : 2

Q.7 Which of the following numbers will replace the question mark (?) in the given series?
69, 70, 74, 83, ?, 124

- Ans ☒ 1. 93
☒ 2. 112
☒ 3. 99
☒ 4. 120

Question ID : 264330102161
Option 1 ID : 264330401109
Option 2 ID : 264330401110
Option 3 ID : 264330401111
Option 4 ID : 264330401112
Status : Answered
Chosen Option : 3

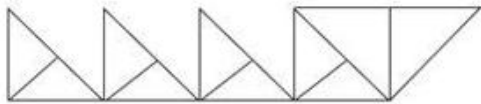
Q.8 Which letter-cluster will replace the question mark (?) to complete the given series?

TUWA, ?, RISI, QEEO, PAOU

- Ans ☒ 1. SUOE
☒ 2. SOUE
☒ 3. UTET
☒ 4. USEO

Question ID : 264330144907
Option 1 ID : 264330567885
Option 2 ID : 264330567886
Option 3 ID : 264330567883
Option 4 ID : 264330567884
Status : Answered
Chosen Option : 2

Q.9 How many triangles are there in the given figure?



- Ans ☒ 1. 14
☒ 2. 15
☒ 3. 12
☒ 4. 13

Question ID : 26433068625
Option 1 ID : 264330269012
Option 2 ID : 264330269013
Option 3 ID : 264330269015
Option 4 ID : 264330269014
Status : Answered
Chosen Option : 2

Q.10 Three of the following four letter-clusters are alike in a certain way and one is different.
Pick the odd one out.

- Ans ☒ 1. GLP
☐ 2. BEJ
☐ 3. QTY
☐ 4. KNS

Question ID : 26433058005
Option 1 ID : 264330227005
Option 2 ID : 264330227004
Option 3 ID : 264330227007
Option 4 ID : 264330227006
Status : Answered
Chosen Option : 1

Q.11 Seven people Tanu, Rano, Beena, Shirin, Kanak, Aditya and Anshul are sitting in a straight row, facing north. Only two people sit to the left of Tanu. Only three people sit between Tanu and Rano. Beena sits second to the right of Shirin. Beena is an immediate neighbour of Rano. Kanak sits to the immediate right of Aditya. Who sits at the extreme right end of the row?

- Ans ☐ 1. Aditya
☐ 2. Kanak
☐ 3. Anshul
☒ 4. Rano

Question ID : 26433082295
Option 1 ID : 264330323013
Option 2 ID : 264330323015
Option 3 ID : 264330323016
Option 4 ID : 264330323014
Status : Answered
Chosen Option : 4

Q.12 Select the correct combination of mathematical signs that can sequentially replace 'A' and balance the following equation.
28 A 14 A 12 A 6 A 4 A 3 A 4

- Ans ☐ 1. -, +, ×, =, ÷, +
☒ 2. -, +, ÷, =, ×, +
☐ 3. +, -, ÷, ×, =, +
☐ 4. -, +, ÷, ×, =, +


Question ID : 264330129586
Option 1 ID : 264330507710
Option 2 ID : 264330507713
Option 3 ID : 264330507712
Option 4 ID : 264330507711
Status : Answered
Chosen Option : 2

Q.13 Select the option in which the given figure is embedded (rotation is NOT allowed).

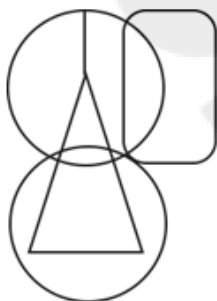


Ans

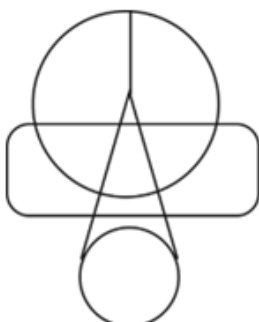
✗ 1.



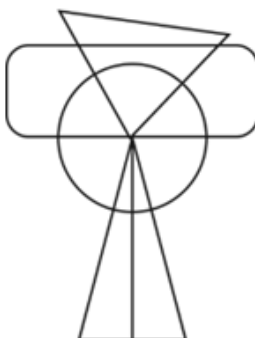
✓ 2.



✗ 3.



✗ 4.



Question ID : 264330132511

Option 1 ID : 264330519140

Option 2 ID : 264330519142

Option 3 ID : 264330519139

Option 4 ID : 264330519141

Status : Answered

Chosen Option : 2

Q.14 Three statements are given followed by three conclusions numbered I, II and III. Assuming the statements to be true, even if they seem to be at variance with commonly known facts, decide which of the conclusions logically follow(s) from the statements.

Statements:

All holders are hangers.

All hangers are hammers.

Some hammers are axes.

Conclusions:

I. Some axes are hangers.

II. Some hammers are holders.

III. Some hangers are holders.

Ans ✓ 1. Only conclusions II and III follow

✗ 2. Only conclusions I and III follow

✗ 3. None of the conclusions follow

✗ 4. Only conclusions I and II follow

Question ID : 26433097231

Option 1 ID : 264330381622

Option 2 ID : 264330381623

Option 3 ID : 264330381624

Option 4 ID : 264330381621

Status : Answered

Chosen Option : 1

Q.15 Two statements are given followed by conclusions numbered 1 and 2. Assuming the statements to be true, even if they seem to be at variance with commonly known facts, decide which of the conclusions logically follow(s) from the statements.

Statements:

1. Some mammals are animals.

2. All animals are birds.

Conclusions:

1. All birds are animals.

2. Some mammals are birds.

Ans ✗ 1. Neither conclusion 1 nor 2 follows

✗ 2. Both conclusions 1 and 2 follow

✗ 3. Only conclusion 1 follows

✓ 4. Only conclusion 2 follows

Question ID : 264330144914

Option 1 ID : 264330567914

Option 2 ID : 264330567912

Option 3 ID : 264330567913

Option 4 ID : 264330567911

Status : Answered

Chosen Option : 4

Q.16 Which of the following terms will replace the question mark (?) in the given series?
NLJ, JHF, FDB, BZX, ?

Ans ✓ 1. XVT

✗ 2. XUT

✗ 3. YVW

✗ 4. YUX

Question ID : 26433090152

Option 1 ID : 264330354085

Option 2 ID : 264330354087

Option 3 ID : 264330354088

Option 4 ID : 264330354086

Status : Answered

Chosen Option : 1

Q.17 A, B, C, D, E, F and G are of different heights. A is taller than only two people. D is shorter than only G. F is taller than A but shorter than B. C is shorter than E. How many people are shorter than E?

- Ans ☒ 1. Four
☒ 2. One
☒ 3. None
☒ 4. Three

Question ID : 264330131655

Option 1 ID : 264330515722

Option 2 ID : 264330515720

Option 3 ID : 264330515719

Option 4 ID : 264330515721

Status : Answered

Chosen Option : 2

Q.18 Select the set in which the numbers are related in the same way as are the numbers of the given set. (NOTE: Operations should be performed on the whole numbers, without breaking down the numbers into its constituent digits. E.g. 13 – Operations on 13 such as adding /deleting /multiplying etc. to 13 can be performed. Breaking down 13 into 1 and 3 and then performing mathematical operations on 1 and 3 is not allowed.)
(4, 10, 23)
(8, 22, 47)

- Ans ☒ 1. (7, 19, 41)
☒ 2. (10, 28, 53)
☒ 3. (5, 13, 23)
☒ 4. (6, 16, 29)

Question ID : 26433078964

Option 1 ID : 264330309869

Option 2 ID : 264330309870

Option 3 ID : 264330309871

Option 4 ID : 264330309868

Status : Answered

Chosen Option : 1

Q.19 'A + B' means 'A is the brother of B'
'A – B' means 'A is the mother of B'
'A × B' means 'A is the husband of B'
'A ÷ B' means 'A is the sister of B'
If 'C + M – S × K – T ÷ Q', then which of the following statements is NOT correct?

- Ans ☒ 1. Q is the husband of T.
☒ 2. S is the father of Q.
☒ 3. M is the father's mother of Q.
☒ 4. C is the mother's brother of S.

Question ID : 264330102483

Option 1 ID : 264330402361

Option 2 ID : 264330402363

Option 3 ID : 264330402362

Option 4 ID : 264330402364

Status : Answered

Chosen Option : 1

Q.20 Select the option that is related to the third word in the same way as the second word is related to the first word.

(The words must be considered as meaningful English words and must not be related to each other based on the number of letters/number of consonants/vowels in the word.)

Clock : Time :: Compass : ?

- Ans
- ☒ 1. Weight
 - ☒ 2. Height
 - ☒ 3. Direction
 - ☒ 4. Heart Rate

Question ID : 26433087284
Option 1 ID : 264330342773
Option 2 ID : 264330342774
Option 3 ID : 264330342776
Option 4 ID : 264330342775
Status : Answered
Chosen Option : 3

Q.21 Select the option that is related to the sixth number in the same way as the first number is related to the second number and the third number is related to the fourth number.

44 : 4 :: 287 : 7 :: ? : 10

- Ans
- ☒ 1. 570
 - ☒ 2. 639
 - ☒ 3. 890
 - ☒ 4. 810

Question ID : 26433087212
Option 1 ID : 264330342486
Option 2 ID : 264330342487
Option 3 ID : 264330342488
Option 4 ID : 264330342485
Status : Answered
Chosen Option : 4

Q.22 If '+' means 'divided by', '-' means 'added to', 'x' means 'subtracted from' and '÷' means 'multiplied by', what will be the value of the following expression?

$(43 \times 23 - (4 \div 3)) + (12 - 4) \div 3$

- Ans
- ☒ 1. 5
 - ☒ 2. 6
 - ☒ 3. 4
 - ☒ 4. 2


Question ID : 264330144869
Option 1 ID : 264330567733
Option 2 ID : 264330567734
Option 3 ID : 264330567732
Option 4 ID : 264330567731
Status : Not Answered
Chosen Option : --

Q.23 Salman starts from his office and drives 29 km towards South. Then he turns right and drives 16 km, again he turns right and drives 29 km. Finally he turns right and drives 13 km. At what distance is he from his start point in a straight line?

- Ans ☒ 1. 29 km
☒ 2. 3 km
☒ 3. 16 km
☒ 4. 13 km

Question ID : 264330132111
 Option 1 ID : 264330517541
 Option 2 ID : 264330517540
 Option 3 ID : 264330517542
 Option 4 ID : 264330517539
 Status : Answered
 Chosen Option : 2

Q.24 Select the figure from among the given options that can replace the question mark (?) in the following series.



Ans

- ☒ 1.
- ☒ 2.
- ☒ 3.
- ☒ 4.

Question ID : 26433087163
 Option 1 ID : 264330342291
 Option 2 ID : 264330342289
 Option 3 ID : 264330342290
 Option 4 ID : 264330342292
 Status : Answered
 Chosen Option : 2

Q.25 Select the number from among the given options that can replace the question mark (?) in the following series.
13, 39, 65, 91, 117, ?

- Ans ☒ 1. 130
☒ 2. 143
☒ 3. 127
☒ 4. 145

Question ID : 264330112658
Option 1 ID : 264330442719
Option 2 ID : 264330442718
Option 3 ID : 264330442720
Option 4 ID : 264330442717
Status : Answered
Chosen Option : 2

Q.26 Two statements are given followed by two conclusions numbered I and II. Assuming the statements to be true, even if they seem to be at variance with commonly known facts, decide which of the conclusions logically follow(s) from the statements.

Statements:

Some blankets are quilts.

Some quilts are bedsheets.

Conclusions:

I. All quilts are blankets.

II. All blankets are bedsheets.

- Ans ☒ 1. Both conclusions I and II follow
☒ 2. Neither conclusion I nor II follows
☒ 3. Only conclusion II follows
☒ 4. Only conclusion I follows

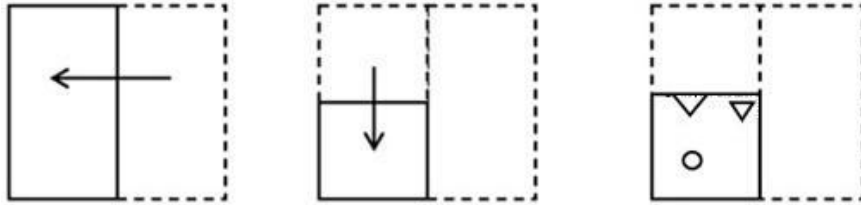
Question ID : 264330144954
Option 1 ID : 264330568073
Option 2 ID : 264330568074
Option 3 ID : 264330568072
Option 4 ID : 264330568071
Status : Answered
Chosen Option : 2

Q.27 Select the number from among the given options that can replace the question mark (?) in the following series.
363, 344, 325, 306, ?

- Ans ☒ 1. 291
☒ 2. 287
☒ 3. 285
☒ 4. 293

Question ID : 264330112670
Option 1 ID : 264330442767
Option 2 ID : 264330442766
Option 3 ID : 264330442765
Option 4 ID : 264330442768
Status : Answered
Chosen Option : 2

Q.28 A paper is folded and cut as shown below. How will it appear when unfolded?



Ans

- ✓ 1.
- ✗ 2.
- ✗ 3.
- ✗ 4.

Question ID : 264330106338

Option 1 ID : 264330417654

Option 2 ID : 264330417655

Option 3 ID : 264330417653

Option 4 ID : 264330417656

Status : Answered

Chosen Option : 1

Q.29 Select the option that is related to the third word in the same way as the second word is related to the first word.

(The words must be considered as meaningful English words and must not be related to each other based on the number of letters/number of consonants/vowels in the word)

Sack : Jute :: Basket : ?

- Ans ✗ 1. Cotton
- ✗ 2. Rayon
- ✓ 3. Bamboo
- ✗ 4. Marble

Question ID : 26433070280

Option 1 ID : 264330275597

Option 2 ID : 264330275599

Option 3 ID : 264330275596

Option 4 ID : 264330275598

Status : Answered

Chosen Option : 3

Q.30 If 'A' stands for '+', 'B' stands for 'x', 'C' stands for '+' and 'D' stands for '-', what will come in place of the question mark (?) in the following equation?
11 B 10 D 18 A 3 C 8 = ?

- Ans
- ☒ 1. 142
 - ☒ 2. 132
 - ☒ 3. 122
 - ☒ 4. 112

Question ID : 264330141900
Option 1 ID : 264330555922
Option 2 ID : 264330555921
Option 3 ID : 264330555920
Option 4 ID : 264330555919
Status : Answered
Chosen Option : 4

Q.31 If $D = B > C = F$ and $F < B = E < A$, then which of the following options is NOT correct?

- Ans
- ☒ 1. $A > C$
 - ☒ 2. $A < F$
 - ☒ 3. $E = D$
 - ☒ 4. $F < E$

Question ID : 26433097270
Option 1 ID : 264330381779
Option 2 ID : 264330381780
Option 3 ID : 264330381778
Option 4 ID : 264330381777
Status : Answered
Chosen Option : 2

Q.32 Three of the following four letter-clusters are alike in a certain way and one is different.
Pick the odd one out.

- Ans
- ☒ 1. JRPV
 - ☒ 2. GTMN
 - ☒ 3. HSNM
 - ☒ 4. EVKP

Question ID : 26433068790
Option 1 ID : 264330269672
Option 2 ID : 264330269674
Option 3 ID : 264330269673
Option 4 ID : 264330269675
Status : Answered
Chosen Option : 2

Q.33 Seven people, A, B, C, D, E, F and G, are sitting in a straight row, facing north. Only 2 people sit to the left of E. G is an immediate neighbour of E. B sits to the immediate right of F. Only 3 people sit between G and F. A sits to the immediate left of D.

Who sits at the extreme left end of the row?

Ans ☒ 1. C

☐ 2. A

☐ 3. G

☐ 4. F

Question ID : 264330144961

Option 1 ID : 264330568100

Option 2 ID : 264330568099

Option 3 ID : 264330568102

Option 4 ID : 264330568101

Status : Answered

Chosen Option : 1

Q.34 Select the number from among the given options that can replace the question mark (?) in the following series.
63, 78, 108, 153, ?

Ans ☐ 1. 185

☒ 2. 213

☐ 3. 193

☐ 4. 207

Question ID : 264330112668

Option 1 ID : 264330442757

Option 2 ID : 264330442760

Option 3 ID : 264330442758

Option 4 ID : 264330442759

Status : Answered

Chosen Option : 2

Q.35 Which of the following numbers will replace the question mark (?) in the given series?
5, 14, 17, ?, 37

Ans ☐ 1. 22

☐ 2. 30

☐ 3. 20

☒ 4. 34

Question ID : 26433082431

Option 1 ID : 264330323558

Option 2 ID : 264330323560

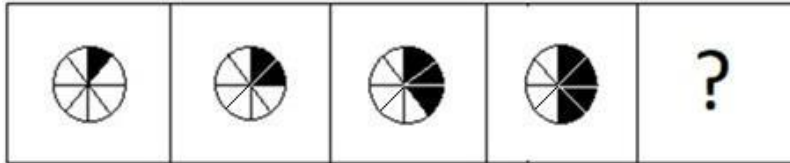
Option 3 ID : 264330323557

Option 4 ID : 264330323559

Status : Answered

Chosen Option : 2

Q.36 Select the figure that will come next in the following series.



Ans

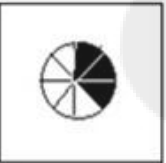
✗ 1.



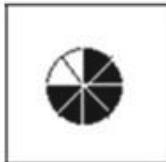
✓ 2.



✗ 3.



✗ 4.



Question ID : 264330122476

Option 1 ID : 264330480028

Option 2 ID : 264330480029

Option 3 ID : 264330480030

Option 4 ID : 264330480027

Status : Answered

Chosen Option : 2

Q.37 What are the two signs to be interchanged for making the following equation correct?

$$[\{ (82 + 22) - (6 \times 2) \} \div (2 - 4)] \times 2 = 24$$

Ans ✗ 1. + and ×

✗ 2. ÷ and +

✓ 3. — and +

✗ 4. + and ×

Question ID : 264330131559

Option 1 ID : 264330515342

Option 2 ID : 264330515340

Option 3 ID : 264330515341

Option 4 ID : 264330515339

Status : Not Attempted and Marked For Review

Chosen Option : --

Q.38 If '+' means '-', '-' means 'x', '÷' means '+', 'x' means '÷', then what is the value of the following expression?

$$7 - 12 + 72 \times 3 \div 11 = ?$$

- Ans
- ☒ 1. 76
 - ☒ 2. 82
 - ☒ 3. 71
 - ☒ 4. 66

Question ID : 264330130351

Option 1 ID : 264330510516

Option 2 ID : 264330510517

Option 3 ID : 264330510515

Option 4 ID : 264330510518

Status : Answered

Chosen Option : 3

Q.39 Select the option that is related to the fourth number in the same way as the first number is related to the second number and the fifth number is related to the sixth number?

$$54 : 3 :: ? : 4 :: 500 : 5$$

- Ans
- ☒ 1. 100
 - ☒ 2. 121
 - ☒ 3. 154
 - ☒ 4. 192

Question ID : 264330144875

Option 1 ID : 264330567758

Option 2 ID : 264330567757

Option 3 ID : 264330567756

Option 4 ID : 264330567755

Status : Not Attempted and Marked For Review

Chosen Option : --

Q.40 In a certain code language, 'ACTION' is written as 'DFWFLK' and 'BISHOP' is written as 'ELVELM'. How will 'MATTER' be written in that language?

- Ans
- ☒ 1. QEWQBO
 - ☒ 2. PEXQCO
 - ☒ 3. QDWQCO
 - ☒ 4. PDWQBO

Question ID : 26433080702

Option 1 ID : 264330316744

Option 2 ID : 264330316741

Option 3 ID : 264330316743

Option 4 ID : 264330316742

Status : Answered

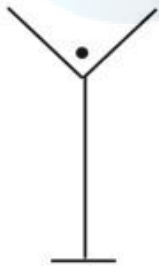
Chosen Option : 4

Q.41 Which of the following terms will replace the question mark (?) in the given series?
DCZ, FFY, ?, JLW, LOV

- Ans
- ☒ 1. HJX
 - ☒ 2. FHY
 - ☒ 3. HIX
 - ☒ 4. GJX

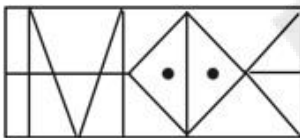
Question ID : 26433089480
Option 1 ID : 264330351424
Option 2 ID : 264330351423
Option 3 ID : 264330351421
Option 4 ID : 264330351422
Status : Answered
Chosen Option : 3

Q.42 Select the option in which the given figure is embedded (rotation is NOT allowed).

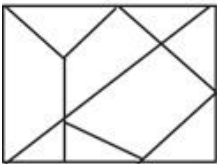


Ans

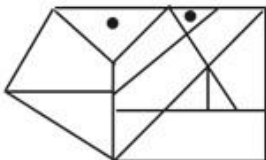
☒ 1.



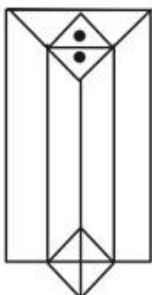
☒ 2.



☒ 3.



☒ 4.



Question ID : 264330111652
Option 1 ID : 264330438696
Option 2 ID : 264330438693
Option 3 ID : 264330438694
Option 4 ID : 264330438695
Status : Answered
Chosen Option : 4

Q.43 Select the set in which the numbers are related in the same way as are the numbers of the following sets.

(NOTE : Operations should be performed on the whole numbers, without breaking down the numbers into its constituent digits. E.g. 13 – Operations on 13 such as adding/subtracting/multiplying etc. to 13 can be performed. Breaking down 13 into 1 and 3 and then performing mathematical operations on 1 and 3 is not allowed)
(6, 12, 9)
(7, 23, 15)

Ans ☒ 1. (20, 40, 60)

☒ 2. (12, 20, 8)

☒ 3. (14, 12, 13)

☒ 4. (15, 7, 8)

Question ID : 26433087041

Option 1 ID : 264330341807

Option 2 ID : 264330341806

Option 3 ID : 264330341805

Option 4 ID : 264330341808

Status : Answered

Chosen Option : 3

Q.44 Select the option that represents the correct order of the given words as they would appear in an English dictionary.

1. Fontina
2. Fondue
3. Fondled
4. Fondant
5. Fontanel
6. Fonder

Ans ☒ 1. 4, 6, 3, 2, 5, 1

☒ 2. 6, 3, 4, 5, 1, 2

☒ 3. 6, 4, 3, 2, 5, 1

☒ 4. 4, 6, 3, 5, 1, 2

Question ID : 264330144932

Option 1 ID : 264330567983

Option 2 ID : 264330567986

Option 3 ID : 264330567985

Option 4 ID : 264330567984

Status : Answered

Chosen Option : 1

Q.45 Point A is 30 m to the east of Point B. Point C is 43 m to the south of Point A. Point C is 45 m to the east of Point D. Point E is 14 m to the south of Point D. Point F is 35 m to the east of Point E. In which direction is Point B with respect to Point F?

Ans ☒ 1. North-east

☒ 2. North-west

☒ 3. South-west

☒ 4. West

Question ID : 264330131628

Option 1 ID : 264330515612

Option 2 ID : 264330515611

Option 3 ID : 264330515613

Option 4 ID : 264330515614

Status : Answered

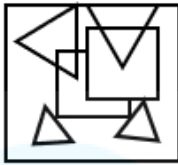
Chosen Option : 2

Q.46 Select the option in which the given figure is embedded (rotation is NOT allowed).

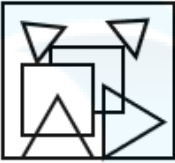


Ans

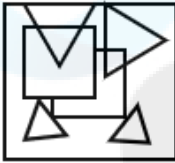
✓ 1.



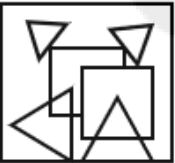
✗ 2.



✗ 3.



✗ 4.



Question ID : 264330132052

Option 1 ID : 264330517305

Option 2 ID : 264330517304

Option 3 ID : 264330517303

Option 4 ID : 264330517306

Status : Answered

Chosen Option : 1

Q.47 Read the given statements and conclusions carefully. Assuming that the information given in the statements is true, even if it appears to be at variance with commonly known facts, decide which of the given conclusions logically follow(s) from the statements.

Statements:

- 1) All breads are cakes.
- 2) Some cakes are pastries.
- 3) All pastries are toffees.

Conclusions:

- I. All cakes are toffees.
- II. No bread is a pastry.

Ans ✗ 1. Only conclusion II follows

✗ 2. Both conclusions I and II follow

✓ 3. Neither conclusion I nor II follows

✗ 4. Only conclusion I follows

Question ID : 26433092433

Option 1 ID : 264330363022

Option 2 ID : 264330363024


Option 3 ID : 264330363023

Option 4 ID : 264330363021

Status : Answered

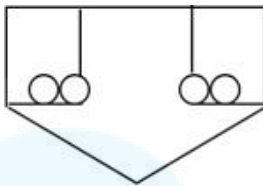
Chosen Option : 1

Q.48 Select the option in which the given figure is embedded (rotation is NOT allowed).

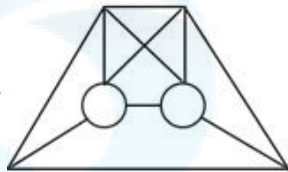


Ans

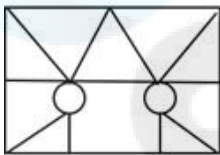
✗ 1.



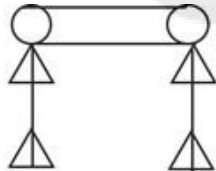
✓ 2.



✗ 3.



✗ 4.



Question ID : 264330111657

Option 1 ID : 264330438715

Option 2 ID : 264330438714

Option 3 ID : 264330438713

Option 4 ID : 264330438716

Status : Answered

Chosen Option : 2

Q.49 If 1st January 2017 was Sunday, then what day of the week was on 1st January 2016?

Ans ✓ 1. Friday

✗ 2. Sunday

✗ 3. Thursday

✗ 4. Saturday

Question ID : 264330144945

Option 1 ID : 264330568036

Option 2 ID : 264330568038

Option 3 ID : 264330568035

Option 4 ID : 264330568037

Status : Answered

Chosen Option : 1

Q.50 Select the option that is related to the fifth number in the same way as the second number is related to the first number and the fourth number is related to the third number.

15 : 220 :: 10 : 95 :: 12 : ?

- Ans ☒ 1. 144
☒ 2. 139
☒ 3. 152
☒ 4. 180

Question ID : 26433089558
Option 1 ID : 264330351733
Option 2 ID : 264330351734
Option 3 ID : 264330351735
Option 4 ID : 264330351736
Status : Answered
Chosen Option : 2

Section : General Awareness

Q.1 Which of the following layers contains ozone?

- Ans ☒ 1. Troposphere
☒ 2. Mesosphere
☒ 3. Thermosphere
☒ 4. Stratosphere

Question ID : 264330117621
Option 1 ID : 264330462511
Option 2 ID : 264330462510
Option 3 ID : 264330462512
Option 4 ID : 264330462509
Status : Not Attempted and Marked For Review
Chosen Option : --

Q.2 Which of the following causes can be attributed to an immense pressure on agricultural land in India?

- a) Right of inheritance
b) Uneconomic land holding size
c) Division of land
d) Multiple cropping

- Ans ☒ 1. a, c and d
☒ 2. Only a and b
☒ 3. a, b and c
☒ 4. b, c and d

Question ID : 264330166818
Option 1 ID : 264330654310
Option 2 ID : 264330654307
Option 3 ID : 264330654309
Option 4 ID : 264330654308
Status : Answered
Chosen Option : 2

Q.3 What was the dominant source of income in the Vijaynagar Empire?

- Ans ☒ 1. Mining
☒ 2. Land revenue
☒ 3. Import duty
☒ 4. Industrial duty

Question ID : 264330109018
Option 1 ID : 264330428351
Option 2 ID : 264330428352
Option 3 ID : 264330428350
Option 4 ID : 264330428349
Status : Answered
Chosen Option : 3

Q.4 Who wrote the book 'If God Was A Banker'?

- Ans ☒ 1. Ravi Subramanian
☒ 2. Jhumpa Lahiri
☒ 3. Amitav Ghosh
☒ 4. Ashwin Sanghi

Question ID : 26433071713
Option 1 ID : 264330281278
Option 2 ID : 264330281279
Option 3 ID : 264330281277
Option 4 ID : 264330281276
Status : Not Attempted and Marked For Review
Chosen Option : --

Q.5 Which device was invented by Carl Friedrich Gauss and Wilhelm Eduard Weber in 1833?

- Ans ☒ 1. Particle accelerator
☒ 2. Transistor
☒ 3. electromagnetic telegraph
☒ 4. Optical maser

Question ID : 264330141664
Option 1 ID : 264330554975
Option 2 ID : 264330554976
Option 3 ID : 264330554977
Option 4 ID : 264330554978
Status : Not Attempted and Marked For Review
Chosen Option : --

Q.6 Match the following.

- | | |
|-----------------------------|--------------------|
| i) Gir National Park | a) Rhinos |
| ii) Rajaji National Park | b) Siberian cranes |
| iii) Keoladeo National Park | c) Lions |
| iv) Kaziranga National Park | d) Elephants |

- Ans
- ☒ 1. i-d, ii-c, iii-a, iv-b
 - ☒ 2. i-d, ii-b, iii-c, iv-a
 - ☒ 3. i-c, ii-d, iii-b, iv-a
 - ☒ 4. i-a, ii-b, iii-c, iv-d

Question ID : 264330166803

Option 1 ID : 264330654250

Option 2 ID : 264330654247

Option 3 ID : 264330654248

Option 4 ID : 264330654249

Status : Answered

Chosen Option : 3

Q.7 Shri SL Bhyrappa received Padma Bhushan in the year 2023 for distinguished service of high order in which field?

- Ans
- ☒ 1. Literature and education
 - ☒ 2. Trade and industry
 - ☒ 3. Science and engineering
 - ☒ 4. Social work

Question ID : 264330137290

Option 1 ID : 264330537789

Option 2 ID : 264330537787

Option 3 ID : 264330537788

Option 4 ID : 264330537790

Status : Answered

Chosen Option : 3

Q.8 Which of the following Musical instruments arts is popularised by Ustad Allarakha Qureshi?

- Ans
- ☒ 1. Tabla
 - ☒ 2. Santoor
 - ☒ 3. Flute
 - ☒ 4. Shehnai

Question ID : 264330144836

Option 1 ID : 264330567599

Option 2 ID : 264330567602

Option 3 ID : 264330567601

Option 4 ID : 264330567600

Status : Answered

Chosen Option : 3

Q.9 Limba Ram is associated with which sport?

- Ans ☒ 1. Polo
☒ 2. Athletics
☒ 3. Archery
☒ 4. Badminton

Question ID : 264330110387

Option 1 ID : 264330433827

Option 2 ID : 264330433826

Option 3 ID : 264330433828

Option 4 ID : 264330433825

Status : Not Attempted and
Marked For Review

Chosen Option : --

Q.10 In July 1968, Indira Gandhi, the then Prime Minister of India, officially recorded impressive strides of the Green Revolution in agriculture by releasing a special stamp entitled _____.

- Ans ☒ 1. Harit Kranti
☒ 2. Fasal Kranti
☒ 3. Green Revolution
☒ 4. Wheat Revolution

Question ID : 26433064537

Option 1 ID : 264330252742

Option 2 ID : 264330252743

Option 3 ID : 264330252740

Option 4 ID : 264330252741

Status : Answered

Chosen Option : 1

Q.11 The Reserve Bank of India was nationalised on _____.

- Ans ☒ 1. October 1, 1949
☒ 2. March 1, 1949
☒ 3. April 1, 1949
☒ 4. January 1, 1949

Question ID : 264330109975

Option 1 ID : 264330432177

Option 2 ID : 264330432178

Option 3 ID : 264330432180

Option 4 ID : 264330432179

Status : Answered

Chosen Option : 3

Q.12 In December 2022, who sworn-in as the Chief Minister of Gujarat?

- Ans ☒ 1. Anandiben Patel
☒ 2. Bhupendra Rajnikant Patel
☒ 3. Vijay Rupani
☒ 4. Hardik Patel

Question ID : 264330158510

Option 1 ID : 264330621401

Option 2 ID : 264330621399

Option 3 ID : 264330621400

Option 4 ID : 264330621402

Status : Answered

Chosen Option : 2

Q.13 According to the Planning Commission of India (2011-12), what is the percentage of the population below the poverty line in Chandigarh?

- Ans ☒ 1. 21.81%
- ☐ 2. 9.91%
- ☐ 3. 9.86%
- ☐ 4. 2.77%

Question ID : 264330119917
Option 1 ID : 264330469946
Option 2 ID : 264330469944
Option 3 ID : 264330469943
Option 4 ID : 264330469945
Status : Answered
Chosen Option : 1

Q.14 Through the 73th Constitutional Amendment Act, 1992, the government fulfilled the constitutional obligation stated in Article _____.

- Ans ☒ 1. 40
- ☐ 2. 43
- ☐ 3. 41
- ☐ 4. 42

Question ID : 264330112782
Option 1 ID : 264330443213
Option 2 ID : 264330443216
Option 3 ID : 264330443214
Option 4 ID : 264330443215
Status : Not Attempted and Marked For Review
Chosen Option : --

Q.15 Who is the Union Minister of Tourism, as of March 2023?

- Ans ☐ 1. Smriti Irani
- ☐ 2. Gajendra Singh Shekhawat
- ☒ 3. G Kishan Reddy
- ☐ 4. Hardeep Puri

Question ID : 264330165220
Option 1 ID : 264330647979
Option 2 ID : 264330647981
Option 3 ID : 264330647980
Option 4 ID : 264330647982
Status : Answered
Chosen Option : 2

Q.16 Mangrove forests of West Bengal are also called:

- Ans ☒ 1. Sunderbans
- ☐ 2. Sholas
- ☐ 3. Sal
- ☐ 4. Shisham

Question ID : 264330170000
Option 1 ID : 264330666676
Option 2 ID : 264330666677
Option 3 ID : 264330666675
Option 4 ID : 264330666678
Status : Answered
Chosen Option : 1

Q.17 Who among the following is the author of the novel 'Tamas'?

- Ans ☒ 1. Bhisham Sahni
☐ 2. Harishankar Parsai
☐ 3. Mohan Rakesh
☐ 4. Rahi Masoom Raza

Question ID : 264330144839

Option 1 ID : 264330567613

Option 2 ID : 264330567612

Option 3 ID : 264330567614

Option 4 ID : 264330567611

Status : Not Attempted and
Marked For Review

Chosen Option : --

Q.18 Which Article deals with the election of the Vice President?

- Ans ☐ 1. Article 70
☐ 2. Article 74
☒ 3. Article 66
☐ 4. Article 52

Question ID : 264330165198

Option 1 ID : 264330647891

Option 2 ID : 264330647893

Option 3 ID : 264330647892

Option 4 ID : 264330647894

Status : Answered

Chosen Option : 4

Q.19 The Indian Olympic Association is affiliated to _____.

- Ans ☐ 1. International Olympic Federation
☒ 2. International Olympic Committee
☐ 3. International Olympic Council
☐ 4. International Olympic Association

Question ID : 264330110383

Option 1 ID : 264330433812

Option 2 ID : 264330433811

Option 3 ID : 264330433809

Option 4 ID : 264330433810

Status : Answered

Chosen Option : 2

Q.20 According to the Planning Commission of India (2011-2012), which group of states has the highest percentage of population below the poverty line?

- Ans ☐ 1. Gujarat and Haryana
☐ 2. Bihar and Odisha
☐ 3. Kerala and Punjab
☒ 4. Chhattisgarh and Jharkhand

Question ID : 264330119921

Option 1 ID : 264330469961

Option 2 ID : 264330469959

Option 3 ID : 264330469962

Option 4 ID : 264330469960

Status : Answered

Chosen Option : 3

Q.21 Who designed India Gate, also called the All-India War Memorial?

- Ans
- ☐ 1. Fredrik Forsyth
 - ☐ 2. John Tailor
 - ☐ 3. Charles Corey
 - ☒ 4. Edwin Lutyens

Question ID : 26433064400
Option 1 ID : 264330252195
Option 2 ID : 264330252194
Option 3 ID : 264330252192
Option 4 ID : 264330252193
Status : Answered
Chosen Option : 4

Q.22 Dispute between two or more states is subject to _____ jurisdiction of the Supreme Court.

- Ans
- ☐ 1. Appellate Jurisdiction
 - ☐ 2. Advisory Jurisdiction
 - ☐ 3. Writ Jurisdiction
 - ☒ 4. Original Jurisdiction

Question ID : 264330130786
Option 1 ID : 264330512257
Option 2 ID : 264330512256
Option 3 ID : 264330512255
Option 4 ID : 264330512258
Status : Answered
Chosen Option : 2

Q.23 शरीर की प्रतिरक्षा प्रणाली किस स्थिति में वास्तविक आंतर फैक्टर प्रोटीन या आपके आमाशय की परत में इसे बनाने वाली कोशिकाओं पर हमला करती है?

- Ans
- ☒ 1. प्रणाशी अरक्तता (Pernicious anaemia)
 - ☐ 2. हार्टनप रोग (Hartnup disorder)
 - ☐ 3. यकृत सिरोसिस (Hepatic cirrhosis)
 - ☐ 4. वर्निक-कोर्साकॉफ सिंड्रोम (Wernicke-Korsakoff syndrome)

Question ID : 264330131720
Option 1 ID : 264330515980
Option 2 ID : 264330515982
Option 3 ID : 264330515979
Option 4 ID : 264330515981
Status : Answered
Chosen Option : 1

Q.24 How many circles does a target have in archery?

- Ans
- ☐ 1. 15
 - ☐ 2. 8
 - ☐ 3. 12
 - ☒ 4. 10

Question ID : 264330119291
Option 1 ID : 264330467453
Option 2 ID : 264330467451
Option 3 ID : 264330467452
Option 4 ID : 264330467454
Status : Answered
Chosen Option : 2

Q.25 In which year did India organise the Asian Games for the second time?

Ans ☒ 1. 1976

☒ 2. 1982

☒ 3. 1951

☒ 4. 1984

Question ID : 264330110367

Option 1 ID : 264330433746

Option 2 ID : 264330433747

Option 3 ID : 264330433745

Option 4 ID : 264330433748

Status : Answered

Chosen Option : 4

Q.26 During the Second Five Year Plan, how many integrated steel plants were set up with foreign collaboration?

Ans ☒ 1. 3

☒ 2. 5

☒ 3. 6

☒ 4. 9

Question ID : 264330163213

Option 1 ID : 264330640165

Option 2 ID : 264330640166

Option 3 ID : 264330640164

Option 4 ID : 264330640163

Status : Not Attempted and
Marked For Review

Chosen Option : --

Q.27 In which year was the tableau of the Union Territory, Ladakh, displayed for the first time at the Rajpath in New Delhi?

Ans ☒ 1. 2020

☒ 2. 2022

☒ 3. 2021

☒ 4. 2019

Question ID : 26433074084

Option 1 ID : 264330290458

Option 2 ID : 264330290457

Option 3 ID : 264330290459

Option 4 ID : 264330290456

Status : Answered

Chosen Option : 2

Q.28 Select the correct alternative of the basis of the given statements on the drainage system of the Harappan civilisation.

Statement I: In most of the Harappan cities, the houses had open drainage systems outside.

Statement II: In the Harappan civilisation, water and garbage used to drain out from the drains located outside the houses and go into the main underground drain.

- Ans**
- ☒ 1. Only Statement I is true.
 - ☒ 2. Neither Statement I nor Statement II is true.
 - ☒ 3. Only Statement II is true.
 - ☒ 4. Both Statement I and Statement II are true.

Question ID : 264330141807

Option 1 ID : 264330555547

Option 2 ID : 264330555550

Option 3 ID : 264330555548

Option 4 ID : 264330555549

Status : Answered

Chosen Option : 3

Q.29 Which of the following Acts is also known as Morley-Minto Reforms?

- Ans**
- ☒ 1. Government of India Act, 1919
 - ☒ 2. Indian Councils Act, 1909
 - ☒ 3. Indian Councils Act, 1892
 - ☒ 4. Government of India Act, 1935

Question ID : 264330111396

Option 1 ID : 264330437672

Option 2 ID : 264330437669

Option 3 ID : 264330437670

Option 4 ID : 264330437671

Status : Answered

Chosen Option : 1

Q.30 Sree Narayana Guru considered the differences based on caste and religion as meaningless and advocated the principle of 'One Caste, one Religion and one God' for all. He belonged to which of the following organisations?

- Ans**
- ☒ 1. Brahmo Samaj
 - ☒ 2. Sree Narayana Dharma Paripalana Yogam
 - ☒ 3. Arya Samaj
 - ☒ 4. Veda Samaj

Question ID : 264330165402

Option 1 ID : 264330648690

Option 2 ID : 264330648687

Option 3 ID : 264330648689

Option 4 ID : 264330648688

Status : Answered

Chosen Option : 2

Q.31 Who among the following singers has been awarded with Bharat Ratna?

- Ans ☒ 1. Lata Mangeskar
☒ 2. Mukesh
☒ 3. Mohammed Rafi
☒ 4. Asha Bhonsle

Question ID : 26433064244
Option 1 ID : 264330251569
Option 2 ID : 264330251571
Option 3 ID : 264330251570
Option 4 ID : 264330251568
Status : Answered
Chosen Option : 3

Q.32 Which structure layer in some cell types is mainly composed of carbohydrates such as cellulose, hemicellulose and lignin in the ratio 4 : 3 : 3 and some fatty substances such as wax?

- Ans ☒ 1. Plasma membrane
☒ 2. Cytosol
☒ 3. Cell wall
☒ 4. Nuclear envelope

Question ID : 264330113472
Option 1 ID : 264330445974
Option 2 ID : 264330445973
Option 3 ID : 264330445976
Option 4 ID : 264330445975
Status : Not Attempted and Marked For Review
Chosen Option : --

Q.33 Which of the following industries are engaged in the re-production and multiplication of certain spices of plants and animals with the object of sale?

- Ans ☒ 1. Extractive
☒ 2. Primary
☒ 3. Genetic
☒ 4. Construction

Question ID : 264330163215
Option 1 ID : 264330640173
Option 2 ID : 264330640171
Option 3 ID : 264330640174
Option 4 ID : 264330640172
Status : Answered
Chosen Option : 2

Q.34 Which of the following statements is true?

Statement I: Indian techniques such as Rasa and Bhava in classical dances have their origins in Bharatmuni's Natyashastra.

Statement II: Bharatanatyam has its origin in Odisha.

Ans ☒ 1. Only Statement I is true.

☐ 2. Only Statement II is true.

☐ 3. Both Statement I and Statement II are true.

☐ 4. Neither Statement I nor Statement II is true.

Question ID : 264330141760

Option 1 ID : 264330555359

Option 2 ID : 264330555360

Option 3 ID : 264330555361

Option 4 ID : 264330555362

Status : **Not Attempted and Marked For Review**

Chosen Option : --

Q.35 निम्नलिखित में से कौन-सा एक सिंहली (श्रीलंकाई) वृत्तांत है, जो मौर्य साम्राज्य का एक महत्वपूर्ण साहित्यिक स्रोत है?

Ans ☐ 1. अर्थशास्त्र (Arthashastra)

☒ 2. महावंश (Mahavamsa)

☐ 3. इंडिका (Indica)

☐ 4. मुद्राराक्षस (Mudrarakshas)

Question ID : 264330165338

Option 1 ID : 264330648434

Option 2 ID : 264330648433

Option 3 ID : 264330648432

Option 4 ID : 264330648431

Status : **Answered**

Chosen Option : 2

Q.36 Who was the author of "Mahabhashya"?

Ans ☐ 1. Bana

☒ 2. Patanjali

☐ 3. Kautilya

☐ 4. Panini

Question ID : 264330112145

Option 1 ID : 264330440668

Option 2 ID : 264330440667

Option 3 ID : 264330440666

Option 4 ID : 264330440665

Status : **Answered**

Chosen Option : 4

Q.37 The primary function of which channel protein is to transport water across the cell membrane in response to the osmotic gradient created by active solute transport?

- Ans
- ☐ 1. Transferrin
 - ☐ 2. Cupredoxins
 - ☐ 3. Mucins
 - ☒ 4. Aquaporins

Question ID : 264330113466

Option 1 ID : 264330445949

Option 2 ID : 264330445950

Option 3 ID : 264330445952

Option 4 ID : 264330445951

Status : Not Attempted and
Marked For Review

Chosen Option : --

Q.38 'Goal' is the autobiography of _____.

- Ans
- ☐ 1. Mary Kom
 - ☒ 2. Major Dhyanchand
 - ☐ 3. Cristiano Ronaldo
 - ☐ 4. Mike Tyson

Question ID : 264330110327

Option 1 ID : 264330433587

Option 2 ID : 264330433586

Option 3 ID : 264330433588

Option 4 ID : 264330433585

Status : Answered

Chosen Option : 2

Q.39 When RBI decides to decrease the repo rate, money supply will _____.

- Ans
- ☐ 1. initially stay constant and then decrease
 - ☒ 2. increase
 - ☐ 3. decrease
 - ☐ 4. remain unaffected

Question ID : 264330109093

Option 1 ID : 264330428652

Option 2 ID : 264330428649

Option 3 ID : 264330428650

Option 4 ID : 264330428651

Status : Answered

Chosen Option : 2

Q.40 Which unsaturated aliphatic hydrocarbon composed of 20 carbon atoms is used to make candles and paraffin wax with solar energy storage capacity?

- Ans
- ☒ 1. Nonane
 - ☒ 2. Triacontane
 - ☒ 3. Eicosane
 - ☒ 4. Octane

Question ID : 264330165459

Option 1 ID : 264330648915

Option 2 ID : 264330648918

Option 3 ID : 264330648916

Option 4 ID : 264330648917

Status : **Not Attempted and Marked For Review**

Chosen Option : --

Q.41 Which of the following is NOT a member of the Arthropoda phylum?

- Ans
- ☒ 1. Prawn
 - ☒ 2. Locust
 - ☒ 3. Pila
 - ☒ 4. Butterfly

Question ID : 264330131701

Option 1 ID : 264330515905

Option 2 ID : 264330515904

Option 3 ID : 264330515906

Option 4 ID : 264330515903

Status : **Not Attempted and Marked For Review**

Chosen Option : --

Q.42 What is the full form of DFC?

- Ans
- ☒ 1. Detritus Food Chain
 - ☒ 2. Dark Food Chain
 - ☒ 3. Dangerous Food Chain
 - ☒ 4. Dead Food Chain

Question ID : 264330111559

Option 1 ID : 264330438323

Option 2 ID : 264330438322

Option 3 ID : 264330438324

Option 4 ID : 264330438321

Status : **Answered**

Chosen Option : 1

Q.43 'Gugga Naumi' – the festival celebrated in Haryana and some parts of Punjab, Rajasthan, UP and Himachal Pradesh _____ is known as the festival of:

- Ans
- ☒ 1. owl-worshipping
 - ☒ 2. cow-worshipping
 - ☒ 3. snake-worshipping
 - ☒ 4. camel-worshipping

Question ID : 264330111157

Option 1 ID : 264330436714

Option 2 ID : 264330436716

Option 3 ID : 264330436713

Option 4 ID : 264330436715

Status : Answered

Chosen Option : 2

Q.44 Which Peshwa signed the treaty of Bassein with the East India Company?

- Ans
- ☒ 1. Raghunath Rao
 - ☒ 2. Madhav Rao
 - ☒ 3. Baji Rao II
 - ☒ 4. Narayan Rao

Question ID : 264330112186

Option 1 ID : 264330440831

Option 2 ID : 264330440829

Option 3 ID : 264330440830

Option 4 ID : 264330440832

Status : Not Attempted and
Marked For Review

Chosen Option : --

Q.45 Which of the following is NOT an alkaline earth metal?

- Ans
- ☒ 1. Ca
 - ☒ 2. Mg
 - ☒ 3. Na
 - ☒ 4. Be

Question ID : 264330131781

Option 1 ID : 264330516225

Option 2 ID : 264330516224

Option 3 ID : 264330516226

Option 4 ID : 264330516223

Status : Not Attempted and
Marked For Review

Chosen Option : --

Q.46 Sattriya dance form is famous in which of these states?

- Ans
- ☒ 1. Himachal Pradesh
 - ☒ 2. Punjab
 - ☒ 3. Tamil Nadu
 - ☒ 4. Assam

Question ID : 264330109268

Option 1 ID : 264330429349

Option 2 ID : 264330429352

Option 3 ID : 264330429350

Option 4 ID : 264330429351

Status : Answered

Chosen Option : 4

Q.47 Padma Bhushan, Guru Vempati Chinna Satyam is renowned for having trained hundreds of students in which of the following dance forms?

- Ans ☒ 1. Kuchipudi
☐ 2. Bharatnatyam
☐ 3. Odissi
☐ 4. Kathak

Question ID : 26433099202

Option 1 ID : 264330389422

Option 2 ID : 264330389423

Option 3 ID : 264330389424

Option 4 ID : 264330389421

Status : Not Attempted and Marked For Review

Chosen Option : --

Q.48 Which of the following is the correct match between column-A and column-B?

Column-A (Elements in earth crust)

- i. Oxygen
- ii. Silicon
- iii. Aluminium
- iv. Iron

Column-B (Total % in earth crust)

- a. 8%
- b. 28%
- c. 47%
- d. 5%

- Ans ☐ 1. i-b, ii-a, iii-c, iv-d
☐ 2. i-c, ii-a, iii-b, iv-d
☐ 3. i-a, ii-b, iii-c, iv-d
☒ 4. i-c, ii-b, iii-a, iv-d

Question ID : 264330111920

Option 1 ID : 264330439766

Option 2 ID : 264330439767

Option 3 ID : 264330439765

Option 4 ID : 264330439768

Status : Answered

Chosen Option : 3

Q.49 In which Five-Year Plan were Removal of Poverty (Garibi Hatao) and Self-Reliance declared as major plan objectives?

- Ans ☐ 1. Seventh Five-Year Plan
☒ 2. Fifth Five-Year Plan
☐ 3. Sixth Five-Year Plan
☐ 4. Eighth Five-Year Plan

Question ID : 264330111735

Option 1 ID : 264330439027

Option 2 ID : 264330439025

Option 3 ID : 264330439026

Option 4 ID : 264330439028

Status : Answered

Chosen Option : 3

Q.50 Which award is presented by the National Institute of Indian Classical Dance?

- Ans ☒ 1. Padma Vibhushan
☒ 2. Sangeet Natak Akademi Award
☒ 3. Abhinandan Saroja Award
☒ 4. Tagore Ratna Award

Question ID : 264330157012

Option 1 ID : 264330615426

Option 2 ID : 264330615423

Option 3 ID : 264330615425

Option 4 ID : 264330615424

Status : Answered

Chosen Option : 2

Section : English Language and Comprehension

Q.1 Parts of the following sentence have been given as options. Select the option that contains an error.

Yesterday, I went to the store and buy some groceries.

- Ans ☒ 1. Yesterday
☒ 2. buy some groceries
☒ 3. to the store and
☒ 4. I went

Question ID : 264330164556

Option 1 ID : 264330645411

Option 2 ID : 264330645414

Option 3 ID : 264330645413

Option 4 ID : 264330645412

Status : Answered

Chosen Option : 2

**Q.2 Select the option that expresses the given sentence in indirect speech.
The class teacher told, "Kneel down in the corridor."**

- Ans ☒ 1. The class teacher ordered to kneel down in the corridor.
☒ 2. The class teacher ordered that they should kneel down in the corridor.
☒ 3. The class teacher told that they kneel down in the corridor.
☒ 4. The class teacher had ordered to kneel down in the corridor.

Question ID : 264330167971

Option 1 ID : 264330658782

Option 2 ID : 264330658780

Option 3 ID : 264330658779

Option 4 ID : 264330658781

Status : Answered

Chosen Option : 4

Q.3 Select the most appropriate option that can substitute the underlined segment in the given sentence.

My brother is resembling my mother.

- Ans ✓ 1. resembles
 ✗ 2. had resembled
 ✗ 3. was resembling
 ✗ 4. had been resembling

Question ID : 264330102393
Option 1 ID : 264330402038
Option 2 ID : 264330402037
Option 3 ID : 264330402039
Option 4 ID : 264330402040
Status : Answered
Chosen Option : 1

Q.4 Select the most appropriate ANTONYM of the bracketed word in the following sentence to fill in the blank.

My favourite _____ (deface) of his home is the large, farmhouse-style kitchen.

- Ans ✓ 1. build
 ✗ 2. dimension
 ✗ 3. regard
 ✗ 4. fact

Question ID : 264330164223
Option 1 ID : 264330644134
Option 2 ID : 264330644131
Option 3 ID : 264330644132
Option 4 ID : 264330644133
Status : Answered
Chosen Option : 2

Q.5 Select the option that expresses the given sentence in passive voice.

The stranger had intended the execution of the plot but the boys thwarted it with their subtlety.

- Ans ✓ 1. The execution of the plot had been intended by the stranger but it was thwarted by the boys with their subtlety.
 ✗ 2. The execution of the plot could have been intended by the stranger but it was being thwarted by the boys with their subtlety.
 ✗ 3. The execution of the plot was intended by the stranger but it had been thwarted by the boys with their subtlety.
 ✗ 4. The execution of the plot was being intended by the stranger but it has been thwarted by the boys with their subtlety.

Question ID : 264330136446
Option 1 ID : 264330534543
Option 2 ID : 264330534545
Option 3 ID : 264330534544
Option 4 ID : 264330534546
Status : Answered
Chosen Option : 3

Q.6 Select the most appropriate **ANTONYM** of the given word.

Virtue

- Ans** ☒ 1. Acquire
☒ 2. Stout
☒ 3. Precise
☒ 4. Vice

Question ID : 264330141098

Option 1 ID : 264330552740

Option 2 ID : 264330552739

Option 3 ID : 264330552742

Option 4 ID : 264330552741

Status : **Answered**

Chosen Option : 1

Q.7 Select the option that expresses the following sentence in passive voice.

The audience loudly cheered the student leader's speech.

- Ans** ☒ 1. They all cheered loudly the leader's speech.
☒ 2. There was a loud cheer for the student.
☒ 3. The student leader was loudly cheered by the audience.
☒ 4. The student leader's speech was loudly cheered by the audience.

Question ID : 264330164200

Option 1 ID : 264330644049

Option 2 ID : 264330644047

Option 3 ID : 264330644048

Option 4 ID : 264330644050

Status : **Answered**

Chosen Option : 4

Q.8 Identify the **ANTONYM** of the following word in the given sentence.

Divulge

The culprit surprised everyone by opting to conceal the secret execution of his plans even after getting beaten by the police.

- Ans** ☒ 1. execution
☒ 2. opting
☒ 3. conceal
☒ 4. culprit

Question ID : 264330135898

Option 1 ID : 264330532450

Option 2 ID : 264330532448

Option 3 ID : 264330532449

Option 4 ID : 264330532447

Status : **Answered**

Chosen Option : 1

Q.9 Sentences of a paragraph are given below in jumbled order. Arrange the sentences in the correct order to form a meaningful and coherent paragraph.

- A. During the period, Europeans were looking for a faster method to reach India by sailing across Africa, and Da Gama succeeded.
B. At that time, gold, spices and other valuables were highly valued in Europe.
C. Vasco da Gama was a Portuguese navigator who sailed from Europe to India.
D. However, they had to travel a vast distance by sea and land to reach them in Asia.

Ans ☒ 1. CBAD

☒ 2. ABCD

☒ 3. CDAB

☒ 4. ADCB

Question ID : 26433097524

Option 1 ID : 264330382771

Option 2 ID : 264330382769

Option 3 ID : 264330382772

Option 4 ID : 264330382770

Status : Answered

Chosen Option : 1

Q.10 Select the most appropriate option that can substitute the underlined segment in the given sentence.

No sooner had I reached the station when the train started moving.

Ans ☒ 1. than the train started moving

☒ 2. when the train had started moving

☒ 3. when the train start moving

☒ 4. then the train had started moving

Question ID : 264330117324

Option 1 ID : 264330461355

Option 2 ID : 264330461353

Option 3 ID : 264330461356

Option 4 ID : 264330461354

Status : Answered

Chosen Option : 1

Q.11 Sentences of a paragraph are given below in jumbled order. Arrange the sentences in the correct order to form a meaningful and coherent paragraph.

- A. Following the demise of the Indus Valley civilisation, the Aryans migrated to India.
B. There is proof that the Aryans possessed a scientific outlook.
C. They held that the universe was regulated by a natural law known as Panchbhutas (five components).
D. Prithvi (heart), Ap (water), Tejas (heat), Vayu (air), and Akasa (sky) are these factors.

Ans ☒ 1. DBCA

☒ 2. BCDA

☒ 3. ABCD

☒ 4. CDAB

Question ID : 26433098150

Option 1 ID : 264330385255

Option 2 ID : 264330385254

Option 3 ID : 264330385253

Option 4 ID : 264330385256

Status : Answered

Chosen Option : 2

Q.12 Sentences of a paragraph are given below. While the first and the last sentences (S1 and S6) are in the correct order, the sentences in between are jumbled up. Arrange the sentences in the correct order to form a meaningful and coherent paragraph.
S1. Sania asked Piyush how he had fared in the examination the week before.
A. Piyush then requested Sania not to talk about it.
B. Piyush said that he had done very badly and was afraid that he would not clear the exam.
C. Sania exclaimed that this was his foolish fear.
D. Sania wanted to know the reason for this request.
S6. She knew Piyush was a hard-working boy and would definitely clear the exam.

- Ans ☒ 1. DABC
☒ 2. ABCD
☒ 3. ADBC
☒ 4. ACBD

Question ID : 264330117460
Option 1 ID : 264330461871
Option 2 ID : 264330461870
Option 3 ID : 264330461872
Option 4 ID : 264330461869
Status : Answered
Chosen Option : 3

Q.13 The following sentence has been split into four segments. Identify the segment that contains a grammatical error.
It takes me an hour / to get to work at the moment, / but when the new road is finished, / it be much quicker.

- Ans ☒ 1. but when the new road is finished
☒ 2. to get to work at the moment
☒ 3. It be much quicker
☒ 4. it takes me an hour

Question ID : 264330120568
Option 1 ID : 264330472515
Option 2 ID : 264330472518
Option 3 ID : 264330472517
Option 4 ID : 264330472516
Status : Answered
Chosen Option : 3

Q.14 Select the most appropriate ANTONYM of the given word.
Brave

- Ans ☒ 1. Moving
☒ 2. Fearless
☒ 3. Coward
☒ 4. Adulterous

Question ID : 264330168135
Option 1 ID : 264330659418
Option 2 ID : 264330659415
Option 3 ID : 264330659416
Option 4 ID : 264330659417
Status : Answered
Chosen Option : 3

Q.15 The following sentence has been split into four segments. Identify the segment that contains a grammatical error.

Salman finishes the work / within hours but he / delays it if not / accompanying by Rohit.

- Ans
- ☒ 1. Salman finishes the work
 - ☒ 2. delays it if not
 - ☒ 3. within hours but he
 - ☒ 4. accompanying by Rohit

Question ID : 26433091956
Option 1 ID : 264330361161
Option 2 ID : 264330361163
Option 3 ID : 264330361162
Option 4 ID : 264330361164
Status : Answered
Chosen Option : 2

Q.16

Select the most appropriate ANTONYM of the underlined word in the given sentence.
It is a misconception that the more you learn, the more likely you are to succeed.

- Ans
- ☒ 1. Hallucination
 - ☒ 2. Fallacy
 - ☒ 3. Illusion
 - ☒ 4. Certainty

Question ID : 264330142767
Option 1 ID : 264330559345
Option 2 ID : 264330559346
Option 3 ID : 264330559344
Option 4 ID : 264330559343
Status : Answered
Chosen Option : 4

Q.17 Select the most appropriate option that can substitute the underlined segment in the given sentence. If there is no need to substitute it, select 'No substitution'.
Suitable to the instructions from the higher officials, the government land was allotted to the poor.

- Ans
- ☒ 1. Despite of
 - ☒ 2. No substitution
 - ☒ 3. As of
 - ☒ 4. In accordance with

Question ID : 264330132829
Option 1 ID : 264330520403
Option 2 ID : 264330520406
Option 3 ID : 264330520404
Option 4 ID : 264330520405
Status : Answered
Chosen Option : 4

Q.18 Select the most appropriate meaning of the given idiom.
Under the weather

- Ans
- ☐ 1. Late to reach due to bad weather
 - ☐ 2. Raining heavily
 - ☐ 3. Surrounded by serious problems of job
 - ☒ 4. Minor sickness

Question ID : 264330135900

Option 1 ID : 264330532458

Option 2 ID : 264330532455

Option 3 ID : 264330532456

Option 4 ID : 264330532457

Status : Answered

Chosen Option : 4

Q.19 Select the option that expresses the given sentence in passive voice.
She promised me a treat.

- Ans
- ☐ 1. I have been promised treats.
 - ☐ 2. Promise of a treat was given by her to myself.
 - ☒ 3. A treat was promised to me by her.
 - ☐ 4. Treats have been promised to me by her.

Question ID : 264330134139

Option 1 ID : 264330525579

Option 2 ID : 264330525582

Option 3 ID : 264330525581

Option 4 ID : 264330525580

Status : Answered

Chosen Option : 3

Q.20 Select the most appropriate option that can substitute the underlined segment in the given sentence.
They wondered about in sheepskins and goatskins in those days.

- Ans
- ☐ 1. wander about in
 - ☐ 2. wondered in
 - ☒ 3. wandered about in
 - ☐ 4. wandered in

Question ID : 264330122675

Option 1 ID : 264330480814

Option 2 ID : 264330480811

Option 3 ID : 264330480813

Option 4 ID : 264330480812

Status : Answered

Chosen Option : 2

Q.21 Select the correct option to substitute the underlined segment in the given sentence. If no substitution is required, select 'No substitution'.

"Speak slow lest you will wake up mommy", said Emily to Tess.

- Ans ☒ 1. should
☐ 2. would
☐ 3. No substitution
☐ 4. could

Question ID : 26433090826
Option 1 ID : 264330356726
Option 2 ID : 264330356727
Option 3 ID : 264330356728
Option 4 ID : 264330356725
Status : Answered
Chosen Option : 4

Q.22 Select the option that expresses the given sentence in reported speech.

He said, "I am living in Ludhiana."

- Ans ☐ 1. He asked that he is living in Ludhiana.
☐ 2. He said that he is living in Ludhiana.
☒ 3. He said that he was living in Ludhiana.
☐ 4. He said that he has been living in Ludhiana.

Question ID : 264330141620
Option 1 ID : 264330554816
Option 2 ID : 264330554815
Option 3 ID : 264330554817
Option 4 ID : 264330554818
Status : Answered
Chosen Option : 2

Q.23 The following sentence has been divided into parts. One of them may contain an error. Select the part that contains the error from the given options.
She has been speaking / four languages / very fluent / since childhood.

- Ans ☐ 1. since childhood.
☐ 2. four languages
☒ 3. very fluent
☐ 4. She has been speaking

Question ID : 264330164237
Option 1 ID : 264330644182
Option 2 ID : 264330644180
Option 3 ID : 264330644181
Option 4 ID : 264330644179
Status : Answered
Chosen Option : 3

Q.24 Select the most appropriate synonym of the given word.
Apprehension

- Ans ☒ 1. Courage
☒ 2. Fear
☒ 3. Myth
☒ 4. Barbarous

Question ID : 264330137010

Option 1 ID : 264330536683

Option 2 ID : 264330536685

Option 3 ID : 264330536684

Option 4 ID : 264330536686

Status : Answered

Chosen Option : 1

Q.25 The following sentence has been split into four segments. Identify the segment that contains a grammatical error.
I'm sure that time / changes things, but it / didn't change anything / unlike my perception of you.

- Ans ☒ 1. didn't change anything
☒ 2. changes things, but it
☒ 3. unlike my perception of you
☒ 4. I'm sure that time

Question ID : 264330133408

Option 1 ID : 264330522665

Option 2 ID : 264330522664

Option 3 ID : 264330522666

Option 4 ID : 264330522663

Status : Answered

Chosen Option : 3

Q.26 Select the most appropriate option to substitute the underlined segment in the given sentence.
Physical activity has been projected to be helpful on avoidance of depression, by the experts.

- Ans ☒ 1. projected to be helpful in the avoidance
☒ 2. projected to be helpful for avoidance
☒ 3. projected to be helpful of avoidance
☒ 4. projected to be helpful about avoidance

Question ID : 264330117040

Option 1 ID : 264330460241

Option 2 ID : 264330460243

Option 3 ID : 264330460244

Option 4 ID : 264330460242

Status : Answered

Chosen Option : 4

Q.27 Select the most appropriate option that can substitute the underlined segment in the given sentence.

Unless you don't answer my question , I will not leave.

- Ans
- ☒ 1. I don't answer my question
 - ☒ 2. you don't answer this question
 - ☒ 3. you answer my question
 - ☒ 4. you don't question my answer

Question ID : 264330117260
Option 1 ID : 264330461100
Option 2 ID : 264330461097
Option 3 ID : 264330461099
Option 4 ID : 264330461098
Status : Answered
Chosen Option : 3

Q.28 Select the option that expresses the given sentence in direct speech.
My mother asked me, "Who is the new Mathematics teacher?"

- Ans
- ☒ 1. My mother asked me who the new Mathematics teacher is.
 - ☒ 2. My mother asked me who the new Mathematics teacher were.
 - ☒ 3. My mother asked me who the new Mathematics teacher was.
 - ☒ 4. My mother asked me who new the Mathematics teacher was.

Question ID : 264330137239
Option 1 ID : 264330537587
Option 2 ID : 264330537588
Option 3 ID : 264330537590
Option 4 ID : 264330537589
Status : Answered
Chosen Option : 1

Q.29 Select the most appropriate option that can substitute the underlined segment in the given sentence.
The scientist says that while the complete core meltdown at Chernobyl was a major disaster, it had fall far short of catastrophe many nuclear power critics had feared, the so-called 'China Syndrome'.

- Ans
- ☒ 1. it fell far short of the catastrophe
 - ☒ 2. it fell far away of the catastrophe
 - ☒ 3. it fell much short of the catastrophe
 - ☒ 4. it fell far shorter of the catastrophe

Question ID : 264330120590
Option 1 ID : 264330472603
Option 2 ID : 264330472604
Option 3 ID : 264330472605
Option 4 ID : 264330472606
Status : Answered
Chosen Option : 2

Q.30 Select the option that expresses the following sentence in passive voice.
The students have presented national level projects to the jury successfully.

- Ans ☒ 1. National level projects had been presented by the students to the jury successfully.
☒ 2. National level projects have been presented by the students to the jury successfully.
☒ 3. National level projects have presented by the students to the jury successfully.
☒ 4. National level projects were presented by the students to the jury successfully.

Question ID : 264330164387

Option 1 ID : 264330644762

Option 2 ID : 264330644761

Option 3 ID : 264330644759

Option 4 ID : 264330644760

Status : Answered

Chosen Option : 1

Q.31 Select the most appropriate meaning of the given idiom.
Spill the beans

- Ans ☒ 1. Not that difficult to comprehend
☒ 2. Act rudely to someone
☒ 3. To make fun of someone
☒ 4. Reveal a secret

Question ID : 264330164174

Option 1 ID : 264330643947

Option 2 ID : 264330643948

Option 3 ID : 264330643949

Option 4 ID : 264330643950

Status : Answered

Chosen Option : 4

Q.32 Select the option that expresses the given sentence in active voice.
Will the gift be delivered by her?

- Ans ☒ 1. Will she delivered the gift?
☒ 2. Will she have the gift delivered?
☒ 3. Will she deliver the gift?
☒ 4. Will she have delivered the gift?

Question ID : 264330164369

Option 1 ID : 264330644689

Option 2 ID : 264330644687

Option 3 ID : 264330644690

Option 4 ID : 264330644688

Status : Answered

Chosen Option : 3

Q.33 Select the most appropriate idiom that can substitute the underlined segment in the given sentence.

The constant noise from the construction site next door is starting to make me extremely angry.

- Ans ☒ 1. bringing me round
☒ 2. drive me up the wall
☒ 3. shove me under the table
☒ 4. driving me blind

Question ID : 264330164571

Option 1 ID : 264330645472

Option 2 ID : 264330645471

Option 3 ID : 264330645473

Option 4 ID : 264330645474

Status : **Not Attempted and
Marked For Review**

Chosen Option : --

Q.34 Select the option that can substitute the underlined word segment with the most appropriate idiom.

Denim jackets are in fashion these days.

- Ans ☒ 1. in lieu of
☒ 2. in vogue
☒ 3. in hand
☒ 4. in a nut-shell

Question ID : 264330165287

Option 1 ID : 264330648237

Option 2 ID : 264330648238

Option 3 ID : 264330648236

Option 4 ID : 264330648235

Status : **Answered**

Chosen Option : 2

Q.35 Select the grammatically correct sentence.

- A. One of most serious issues with youngsters is an addiction to social media. An issue which needs attention.
B. One of the most serious issues with youngsters is addiction to social media. An issue which needs attention.
C. One of the most serious issues with youngsters is an addiction to social media. Issue which needs attention.
D. One of the most serious issues with youngsters is an addiction to social media. An issue which needs attention.

- Ans ☒ 1. A
☒ 2. D
☒ 3. C
☒ 4. B

Question ID : 26433094789

Option 1 ID : 264330371977

Option 2 ID : 264330371980

Option 3 ID : 264330371979

Option 4 ID : 264330371978

Status : **Answered**

Chosen Option : 2

Q.36 The following sentence has been divided into parts. One of them may contain an error. Select the part that contains the error from the given options. If you don't find any error, mark 'No error' as your answer.
The Arabian Nights / have / many interesting stories for readers.

- Ans ☒ 1. have
☐ 2. The Arabian Nights
☐ 3. No error
☐ 4. many interesting stories for readers

Question ID : 264330123029
Option 1 ID : 264330482180
Option 2 ID : 264330482179
Option 3 ID : 264330482182
Option 4 ID : 264330482181
Status : Answered
Chosen Option : 1

Q.37 Select the option that expresses the given sentence in passive voice.
They have built a new bridge across the river.

- Ans ☐ 1. A new bridge has been building across the river by them.
☐ 2. A new bridge will have been built across the river by them.
☐ 3. They have been building a new bridge across the river.
☒ 4. A new bridge has been built across the river by them.

Question ID : 264330164244
Option 1 ID : 264330644210
Option 2 ID : 264330644208
Option 3 ID : 264330644209
Option 4 ID : 264330644207
Status : Answered
Chosen Option : 1

Q.38 Select the most appropriate synonym of the given word.
Explicit

- Ans ☐ 1. Harness
☐ 2. Oppress
☒ 3. Obvious
☐ 4. Droopy

Question ID : 264330164271
Option 1 ID : 264330644309
Option 2 ID : 264330644307
Option 3 ID : 264330644310
Option 4 ID : 264330644308
Status : Answered
Chosen Option : 2

Q.39 Select the most appropriate option that can substitute the underlined segment in the given sentence.

A few boys were kept up because of disobedience.

- Ans
- ☒ 1. kept in
 - ☒ 2. kept back
 - ☒ 3. kept on
 - ☒ 4. kept off

Question ID : 264330122676

Option 1 ID : 264330480817

Option 2 ID : 264330480816

Option 3 ID : 264330480815

Option 4 ID : 264330480818

Status : Answered

Chosen Option : 4

Q.40 Select the option that expresses the given sentence in passive voice.
I kicked the ball.

- Ans
- ☒ 1. The ball was kicked by you.
 - ☒ 2. The ball is kicked by me.
 - ☒ 3. The ball was kicked by me.
 - ☒ 4. The ball had been kicked by me.

Question ID : 264330168328

Option 1 ID : 264330660178

Option 2 ID : 264330660175

Option 3 ID : 264330660176

Option 4 ID : 264330660177

Status : Answered

Chosen Option : 3

Q.41 Select the option that expresses the given sentence in passive voice.
Can you give her a book?

- Ans
- ☒ 1. Can she given a book by you?
 - ☒ 2. Can she be give a book by you?
 - ☒ 3. Can she be given a book by you?
 - ☒ 4. Can you be given a book by her?

Question ID : 264330132776

Option 1 ID : 264330520201

Option 2 ID : 264330520199

Option 3 ID : 264330520200

Option 4 ID : 264330520202

Status : Answered

Chosen Option : 2

Q.42 Select the correct direct narration of the given sentence.
Neeraj said that he would go as soon as it was possible.

- Ans ☒ 1. Neeraj say, "I should go as soon as it is possible".
☒ 2. Neeraj says, "I may went as soon as it was possible".
☒ 3. Neeraj said, "I shall go as soon as it is possible".
☒ 4. Neeraj say, "I shall went as soon as it is possible".

Question ID : 264330132881

Option 1 ID : 264330520591

Option 2 ID : 264330520592

Option 3 ID : 264330520594

Option 4 ID : 264330520593

Status : Answered

Chosen Option : 3

Q.43 Select the most appropriate option that can substitute the underlined segment in the given sentence.

He was fatiguing because he spent seven break-less hours on the computer.

- Ans ☒ 1. was fatigueness because
☒ 2. was fatigueless because
☒ 3. was fatigued because
☒ 4. has been fatiguing because

Question ID : 264330101001

Option 1 ID : 264330396552

Option 2 ID : 264330396551

Option 3 ID : 264330396550

Option 4 ID : 264330396549

Status : Answered

Chosen Option : 4

Q.44 Select the option that expresses the following sentence in indirect speech.
She said to me, "I have often told you not to play with fire."

- Ans ☒ 1. She told me that she has often told me not to play with fire.
☒ 2. She asked me that she had often told me not to play with fire.
☒ 3. She said to me that she has often told me not to play with fire.
☒ 4. She told me that she had often told me not to play with fire.

Question ID : 264330157048

Option 1 ID : 264330615570

Option 2 ID : 264330615568

Option 3 ID : 264330615569

Option 4 ID : 264330615567

Status : Answered

Chosen Option : 4

Q.45 Select the most appropriate option that can substitute the underlined segment in the given sentence.

The excessive using of pocket calculators can stultify your capacity to do mental calculations.

- Ans
- ☒ 1. used of pocket calculators
 - ☒ 2. use of pocket calculators
 - ☒ 3. aversion of pocket calculators
 - ☒ 4. utility of pocket calculators

Question ID : 264330117248

Option 1 ID : 264330461051

Option 2 ID : 264330461049

Option 3 ID : 264330461052

Option 4 ID : 264330461050

Status : Answered

Chosen Option : 3

Q.46 Select the most appropriate meaning of the underlined idiom in the following sentence.

After much of efforts, I could finally hit the nail on the head and succeed.

- Ans
- ☒ 1. Make an error
 - ☒ 2. Speak or act precisely
 - ☒ 3. Accidentally injure oneself
 - ☒ 4. Complete a task swiftly

Question ID : 264330168144

Option 1 ID : 264330659453

Option 2 ID : 264330659451

Option 3 ID : 264330659452

Option 4 ID : 264330659454

Status : Answered

Chosen Option : 4

Q.47 Select the most appropriate synonym of the given word.
Beneficial

- Ans
- ☒ 1. Helpful
 - ☒ 2. Winsome
 - ☒ 3. Strangle
 - ☒ 4. Kernel

Question ID : 264330164272

Option 1 ID : 264330644313

Option 2 ID : 264330644314

Option 3 ID : 264330644311

Option 4 ID : 264330644312

Status : Answered

Chosen Option : 1

Q.48 Select the option that expresses the given sentence in indirect speech.
Riya asked, "Are you feeling fine?"

- Ans ☒ 1. Riya asked me if I was feeling fine?
☒ 2. Riya asked me if I was feeling fine.
☒ 3. Riya asked her if she was feeling fine.
☒ 4. Riya told me if I was feeling fine.

Question ID : 264330168335

Option 1 ID : 264330660204

Option 2 ID : 264330660206

Option 3 ID : 264330660203

Option 4 ID : 264330660205

Status : Answered

Chosen Option : 3

Q.49 Identify the ANTONYM of the following word in the given sentence.

Humility

The little girl was humble enough to negate the ideology of her classmate whose arrogance was indomitable.

- Ans ☒ 1. arrogance
☒ 2. indomitable
☒ 3. negate
☒ 4. humble

Question ID : 264330167913

Option 1 ID : 264330658573

Option 2 ID : 264330658574

Option 3 ID : 264330658572

Option 4 ID : 264330658571

Status : Answered

Chosen Option : 1

Q.50 Sentences of a paragraph are given below. While the first and the last sentences (S1 and S6) are in the correct order, the sentences in between are jumbled up. Arrange the sentences in the correct order to form a meaningful and coherent paragraph.

S1. Generation gap is actually the difference between the ebullience of youth on the one hand and the caution and prudence of old age on the other.

A. Or, it is expression of the rivalry between the old and the young.

B. The old declare the younger lot to be arrogant fools; the young declare the older people to be senile and insipid.

C. The old want to prolong their hold on authority while the young are over-eager to grab it.

D. The gulf between the two generations cannot be bridged.

S6. However, in modern times, lifestyles are changing so fast that the gap between any two successive generations becomes easily perceptible.

- Ans ☒ 1. CDBA
☒ 2. CABD
☒ 3. ACBD
☒ 4. CBAD

Question ID : 264330117464

Option 1 ID : 264330461885

Option 2 ID : 264330461886

Option 3 ID : 264330461887

Option 4 ID : 264330461888

Status : Answered

Chosen Option : 2

Q.51 Select the most appropriate **ANTONYM** of the given word.
Contentment

- Ans** ☒ 1. Sadness
 ☐ 2. Pleasure
 ☐ 3. Greatness
 ☐ 4. Meanness

Question ID : 264330168278
Option 1 ID : 264330659982
Option 2 ID : 264330659981
Option 3 ID : 264330659980
Option 4 ID : 264330659979
Status : Answered
Chosen Option : 4

Q.52 Parts of the following sentence have been given as options. Select the option that contains an error.

By the way a lorry crashed into the car but the boys were lucky and escaped with only minor injuries.

- Ans** ☐ 1. the boys were lucky and
 ☐ 2. crashed into the car but
 ☒ 3. By the way a lorry
 ☐ 4. escaped with only minor injuries

Question ID : 26433099125
Option 1 ID : 264330389119
Option 2 ID : 264330389118
Option 3 ID : 264330389117
Option 4 ID : 264330389120
Status : Answered
Chosen Option : 2

Q.53 Select the option that expresses the given sentence in reported (or indirect) speech.
Mohan said to Hari, "I will study for the exam."

- Ans** ☐ 1. Mahon would say to Hari that he will study for the exam.
 ☐ 2. Mohan said to Hari that he will study for the exam.
 ☒ 3. Mohan told Hari that he would study for the exam.
 ☐ 4. Mohan suggested Hari that he would study for the exam.

Question ID : 264330164248
Option 1 ID : 264330644224
Option 2 ID : 264330644223
Option 3 ID : 264330644225
Option 4 ID : 264330644226
Status : Answered
Chosen Option : 3

Q.54 The following sentence has been divided into parts. One of them may contain an error.
Select the part that contains the error from the given options.
The team played / extremely / good / during the match.

- Ans ☒ 1. extremely
☒ 2. good
☒ 3. during the match.
☒ 4. The team played

Question ID : 264330164236
Option 1 ID : 264330644176
Option 2 ID : 264330644177
Option 3 ID : 264330644178
Option 4 ID : 264330644175
Status : Answered
Chosen Option : 2

Q.55 Select the most appropriate option that can substitute the underlined segment in the given sentence.

Me and Samridhi live here.

- Ans ☒ 1. Samridhi with I
☒ 2. Samridhi and I
☒ 3. Samridhi and me
☒ 4. I and Samridhi

Question ID : 264330117265
Option 1 ID : 264330461120
Option 2 ID : 264330461119
Option 3 ID : 264330461118
Option 4 ID : 264330461117
Status : Answered
Chosen Option : 2

Q.56 Parts of a paragraph are given below. While the first and the last sentences (S1 and S6) are in the correct order, the parts in between are jumbled up. Arrange the parts in the correct order to form a meaningful and coherent paragraph.

S1. Obesity is a condition where the body accumulates excess fat, leading to a considerable increase in the body weight.

A. This means adverse health effects on the people of our country

B. Such as high blood pressure, high cholesterol, diabetes, heart diseases leading to premature death.

C. It is assuming alarming proportions in our country.

D. To avoid this, lifestyle needs to be changed.

S6. Lack of sports and sedentary lifestyle also contribute to higher obesity level.

- Ans ☒ 1. CBAD
☒ 2. CABD
☒ 3. ABDC
☒ 4. ACBD

Question ID : 264330117463
Option 1 ID : 264330461881
Option 2 ID : 264330461883
Option 3 ID : 264330461884
Option 4 ID : 264330461882
Status : Answered
Chosen Option : 2

Q.57 Select the most appropriate **ANTONYM** of the underlined word in the following sentence.

One should celebrate every triumph in life.

- Ans
- ☒ 1. Milestone
 - ☒ 2. Victory
 - ☒ 3. Instrument
 - ☒ 4. Defeat

Question ID : 264330164308

Option 1 ID : 264330644447

Option 2 ID : 264330644448

Option 3 ID : 264330644450

Option 4 ID : 264330644449

Status : Answered

Chosen Option : 4

Q.58 The following sentence has been split into four segments. Identify the segment that contains a grammatical error.

If you have / faith in God, / everything turn out / to be all right.

- Ans
- ☒ 1. If you have
 - ☒ 2. to be all right
 - ☒ 3. everything turn out
 - ☒ 4. faith in God,

Question ID : 26433094140

Option 1 ID : 264330369561

Option 2 ID : 264330369564

Option 3 ID : 264330369563

Option 4 ID : 264330369562

Status : Answered

Chosen Option : 3

Q.59 Select the option that expresses the given sentence in direct speech.

The security asked him who he was and which flat he wished to visit.

- Ans
- ☒ 1. The security said, "Who are you? Which flat do you wish to visit?"
 - ☒ 2. The security said, "Who are you? Which flat are you wishing to visit?"
 - ☒ 3. The security said, "Who are you? Which flat you wish to be visited?"
 - ☒ 4. The security said, "Who are you? Which flat you wished to visit?"

Question ID : 26433091867

Option 1 ID : 264330360807

Option 2 ID : 264330360805

Option 3 ID : 264330360806

Option 4 ID : 264330360808

Status : Answered

Chosen Option : 1

Q.60 Sentences of a paragraph are given below in jumbled order. Arrange the sentences in the correct order to form a meaningful and coherent paragraph.

- A. Pandit Vidyadhar Bhattacharya was consulted by Sawai Jai Singh II of Jaipur when creating these enormous instruments.
B. The word Jantar Mantar, which in Sanskrit signifies instruments and formulas, has been corrupted.
C. His measurements of the equinoxes' precession and the ecliptic's obliquity are his two most important contributions to astronomy.
D. Samrat Yantra, Ram Yantra, and Jai Prakash were his original creations.

Ans ☒ 1. CDBA

☒ 2. BADC

☒ 3. ABCD

☒ 4. DACB

Question ID : 26433098156

Option 1 ID : 264330385277

Option 2 ID : 264330385279

Option 3 ID : 264330385280

Option 4 ID : 264330385278

Status : Answered

Chosen Option : 2

Q.61 In question, four alternatives are given for the idiom under in the sentence. Choose the alternative which best expresses the meaning of the underlined idiom.

Mr. Avinash is very nice and friendly, but his brother is very toffee-nosed.

Ans ☒ 1. A person who is arrogant and cruel

☒ 2. A person who thinks he is intelligent and perfect

☒ 3. A person who thinks he is of a high social class and looks down on people of lower class

☒ 4. A person who never trusts anyone

Question ID : 264330134120

Option 1 ID : 264330525503

Option 2 ID : 264330525505

Option 3 ID : 264330525504

Option 4 ID : 264330525506

Status : Answered

Chosen Option : 4

Q.62 Sentences of a paragraph are given below. While the first and the last sentences (S1 and S6) are in the correct order, the sentences in between are jumbled up. Arrange the sentences in the correct order to form a meaningful and coherent paragraph.

S1. One can find ants anywhere on earth.

A. They also use chemicals called pheromones to leave scent.

B. They can communicate effectively with each other.

C. Thus, they are called the earth's most successful species.

D. There are about 2,000 species of ants.

S6. These scent trails help other ants to follow.

Ans ☒ 1. ABCD

☒ 2. BACD

☒ 3. DCBA

☒ 4. CDBA

Question ID : 264330117277

Option 1 ID : 264330461165

Option 2 ID : 264330461168

Option 3 ID : 264330461166

Option 4 ID : 264330461167

Status : Answered

Chosen Option : 3

Q.63 Select the option that changes the form of narration in the following sentence.

My sister asked me, "When will I be allowed to go to the church?"

- Ans**
- ☒ 1. My sister asked me that when she would be allowed to go to the church.
 - ☒ 2. My sister prayed when she will be allowed to go to the church.
 - ☒ 3. My sister asked me when she would be allowed to go to the church.
 - ☒ 4. My sister asked me when she will be allowed to go to the church.

Question ID : 264330163269

Option 1 ID : 264330640390

Option 2 ID : 264330640387

Option 3 ID : 264330640388

Option 4 ID : 264330640389

Status : Answered

Chosen Option : 1

Q.64 Select the most appropriate option to fill in the blank.

**On 25 August 1925, the Royal Commission on Indian Currency and Finance
_____ the establishment of the Central Bank of India.**

- Ans**
- ☒ 1. defined
 - ☒ 2. figured
 - ☒ 3. censored
 - ☒ 4. proposed

Question ID : 26433098916

Option 1 ID : 264330388320

Option 2 ID : 264330388318

Option 3 ID : 264330388317

Option 4 ID : 264330388319

Status : Answered

Chosen Option : 4

Q.65 Select the option that expresses the following sentence in passive voice.
I was carrying the Indian flag.

- Ans**
- ☒ 1. The Indian flag were being carried by me.
 - ☒ 2. The Indian flag is being carried by me.
 - ☒ 3. The Indian flag had being carried by me.
 - ☒ 4. The Indian flag was being carried by me.

Question ID : 264330164344

Option 1 ID : 264330644590

Option 2 ID : 264330644588

Option 3 ID : 264330644589

Option 4 ID : 264330644587

Status : Answered

Chosen Option : 4

Comprehension:

In the following passage, some words have been deleted. Read the passage carefully and select the most appropriate option to fill in each blank.

The London Eye, formally known as Millennium Wheel, was officially called the British Airways London Eye and then the Merlin Entertainments London Eye. The London Eye, a giant Ferris Wheel, is situated (I) _____ the banks of the River Thames in London, England. Since 20 January 2011, its official name is the EDP Energy London Eye following a three-year sponsorship deal. The (II) _____ structure is 135 m tall and the wheel has a diameter of 120 m or 394 feet. This Ferris Wheel, which is the tallest in Europe, claims to be the most popular paid tourist (III) _____ in the United Kingdom. It is visited by over 3.5 million people annually making it London's most popular tourist attraction for which an admission fee is charged and is sometimes credited with sparking a worldwide revival of Ferris wheel Construction When erected in 1999 it was the tallest Ferris wheel in the world. Until (IV) _____ first by the 160 m Star of Nanchang in 2006 and then the 165 m Singapore Flyer in 2008. (V) _____ by an A-frame on the side only, the Eye is described as 'the world's tallest cantilevered observation wheel'. It provides the highest public viewing point and can be considered as the 20th tallest structure in London.

SubQuestion No : 66

Q.66 Read the given passage carefully and select the appropriate word in the context of the whole passage to fill in the blank.

The London Eye, a giant Ferris Wheel, is situated (I) _____ the banks of the River Thames in London, England.

In the given passage the suitable word for blank (I) is:

- Ans
- ☒ 1. with
 - ☒ 2. into
 - ☒ 3. on
 - ☒ 4. for

Question ID : 264330164656

Option 1 ID : 264330645795

Option 2 ID : 264330645798

Option 3 ID : 264330645796

Option 4 ID : 264330645797

Status : Answered

Chosen Option : 3

Comprehension:

In the following passage, some words have been deleted. Read the passage carefully and select the most appropriate option to fill in each blank.

The London Eye, formally known as Millennium Wheel, was officially called the British Airways London Eye and then the Merlin Entertainments London Eye. The London Eye, a giant Ferris Wheel, is situated (I) _____ the banks of the River Thames in London, England. Since 20 January 2011, its official name is the EDP Energy London Eye following a three-year sponsorship deal. The (II) _____ structure is 135 m tall and the wheel has a diameter of 120 m or 394 feet. This Ferris Wheel, which is the tallest in Europe, claims to be the most popular paid tourist (III) _____ in the United Kingdom. It is visited by over 3.5 million people annually making it London's most popular tourist attraction for which an admission fee is charged and is sometimes credited with sparking a worldwide revival of Ferris wheel construction. When erected in 1999 it was the tallest Ferris wheel in the world. Until (IV) _____ first by the 160 m Star of Nanchang in 2006 and then the 165 m Singapore Flyer in 2008. (V) _____ by an A-frame on the side only, the Eye is described as 'the world's tallest cantilevered observation wheel'. It provides the highest public viewing point and can be considered as the 20th tallest structure in London.

SubQuestion No : 67

Q.67 Read the given passage carefully and select the appropriate word in the context of the whole passage to fill in the blank.

The (II) _____ structure is 135 m tall and the wheel has a diameter of 120 m.

In the given passage the suitable word for blank (II) is:

- Ans ☒ 1. entire
 ☒ 2. generous
 ☒ 3. deceptive
 ☒ 4. remedial

Question ID : 264330164657

Option 1 ID : 264330645802

Option 2 ID : 264330645799

Option 3 ID : 264330645801

Option 4 ID : 264330645800

Status : Answered

Chosen Option : 1

Comprehension:

In the following passage, some words have been deleted. Read the passage carefully and select the most appropriate option to fill in each blank.

The London Eye, formally known as Millennium Wheel, was officially called the British Airways London Eye and then the Merlin Entertainments London Eye. The London Eye, a giant Ferris Wheel, is situated (I) _____ the banks of the River Thames in London, England. Since 20 January 2011, its official name is the EDP Energy London Eye following a three-year sponsorship deal. The (II) _____ structure is 135 m tall and the wheel has a diameter of 120 m or 394 feet. This Ferris Wheel, which is the tallest in Europe, claims to be the most popular paid tourist (III) _____ in the United Kingdom. It is visited by over 3.5 million people annually making it London's most popular tourist attraction for which an admission fee is charged and is sometimes credited with sparking a worldwide revival of Ferris wheel Construction. When erected in 1999 it was the tallest Ferris wheel in the world. Until (IV) _____ first by the 160 m Star of Nanchang in 2006 and then the 165 m Singapore Flyer in 2008. (V) _____ by an A-frame on the side only, the Eye is described as 'the world's tallest cantilevered observation wheel'. It provides the highest public viewing point and can be considered as the 20th tallest structure in London.

SubQuestion No : 68

Q.68 Read the given passage carefully and select the appropriate word in the context of the whole passage to fill in the blank.

This Ferris Wheel, which is the tallest in Europe, claims to be the most popular paid tourist (III) _____ in the United Kingdom.

In the given passage the suitable word for blank (III) is:

- Ans
- ☒ 1. emergency
 - ☒ 2. attraction
 - ☒ 3. juncture
 - ☒ 4. agreement

Question ID : 264330164658

Option 1 ID : 264330645805

Option 2 ID : 264330645803

Option 3 ID : 264330645806

Option 4 ID : 264330645804

Status : Answered

Chosen Option : 2

Comprehension:

In the following passage, some words have been deleted. Read the passage carefully and select the most appropriate option to fill in each blank.

The London Eye, formally known as Millennium Wheel, was officially called the British Airways London Eye and then the Merlin Entertainments London Eye. The London Eye, a giant Ferris Wheel, is situated (I) _____ the banks of the River Thames in London, England. Since 20 January 2011, its official name is the EDP Energy London Eye following a three-year sponsorship deal. The (II) _____ structure is 135 m tall and the wheel has a diameter of 120 m or 394 feet. This Ferris Wheel, which is the tallest in Europe, claims to be the most popular paid tourist (III) _____ in the United Kingdom. It is visited by over 3.5 million people annually making it London's most popular tourist attraction for which an admission fee is charged and is sometimes credited with sparking a worldwide revival of Ferris wheel Construction When erected in 1999 it was the tallest Ferris wheel in the world. Until (IV) _____ first by the 160 m Star of Nanchang in 2006 and then the 165 m Singapore Flyer in 2008. (V) _____ by an A-frame on the side only, the Eye is described as 'the world's tallest cantilevered observation wheel'. It provides the highest public viewing point and can be considered as the 20th tallest structure in London.

SubQuestion No : 69

Q.69 Read the given passage carefully and select the appropriate word in the context of the whole passage to fill in the blank.

It is visited by over 3.5 million people annually. When erected in 1999 it was the tallest Ferris wheel in the world. Until (IV) _____ first by the 160 m Star of Nanchang in 2006 and then the 165 m Singapore Flyer in 2008.

In the given passage the suitable word for blank (IV) is:

- Ans
- ☒ 1. negotiated
 - ☒ 2. surpassed
 - ☒ 3. advanced
 - ☒ 4. disbursed

Question ID : 264330164659

Option 1 ID : 264330645807

Option 2 ID : 264330645808

Option 3 ID : 264330645809

Option 4 ID : 264330645810

Status : Answered

Chosen Option : 2

Comprehension:

In the following passage, some words have been deleted. Read the passage carefully and select the most appropriate option to fill in each blank.

The London Eye, formally known as Millennium Wheel, was officially called the British Airways London Eye and then the Merlin Entertainments London Eye. The London Eye, a giant Ferris Wheel, is situated (I) _____ the banks of the River Thames in London, England. Since 20 January 2011, its official name is the EDP Energy London Eye following a three-year sponsorship deal. The (II) _____ structure is 135 m tall and the wheel has a diameter of 120 m or 394 feet. This Ferris Wheel, which is the tallest in Europe, claims to be the most popular paid tourist (III) _____ in the United Kingdom. It is visited by over 3.5 million people annually making it London's most popular tourist attraction for which an admission fee is charged and is sometimes credited with sparking a worldwide revival of Ferris wheel construction. When erected in 1999 it was the tallest Ferris wheel in the world. Until (IV) _____ first by the 160 m Star of Nanchang in 2006 and then the 165 m Singapore Flyer in 2008. (V) _____ by an A-frame on the side only, the Eye is described as 'the world's tallest cantilevered observation wheel'. It provides the highest public viewing point and can be considered as the 20th tallest structure in London.

SubQuestion No : 70

Q.70 Read the given passage carefully and select the appropriate word in the context of the whole passage to fill in the blank.

(V) _____ by an A-frame on the side only, the Eye is described as 'the world's tallest cantilevered observation wheel'.

In the given passage the suitable word for blank (V) is:

- Ans ☒ 1. Supported
☒ 2. Required
☒ 3. Consumed
☒ 4. Credited

Question ID : 264330164660

Option 1 ID : 264330645811

Option 2 ID : 264330645814

Option 3 ID : 264330645813

Option 4 ID : 264330645812

Status : Answered

Chosen Option : 1

Comprehension:

In the following passage, some words have been deleted. Read the passage carefully and select the most appropriate option to fill in each blank.

Global warming is a significant (1) _____ issue that requires immediate attention. The (2) _____ of greenhouse gases in the atmosphere has led to a (3) _____ increase in average temperatures worldwide. This phenomenon (4) _____ various adverse effects on the environment, including (5) _____ weather patterns and rising sea levels.

SubQuestion No : 71

Q.71 Select the most appropriate option to fill in blank number 1.

- Ans ☒ 1. environmental
☒ 2. controversial
☒ 3. detrimental
☒ 4. beneficial

Question ID : 264330164678

Option 1 ID : 264330645879

Option 2 ID : 264330645881

Option 3 ID : 264330645880

Option 4 ID : 264330645882

Status : Answered

Chosen Option : 3

Comprehension:

In the following passage, some words have been deleted. Read the passage carefully and select the most appropriate option to fill in each blank.

Global warming is a significant (1)_____ issue that requires immediate attention. The (2)_____ of greenhouse gases in the atmosphere has led to a (3)_____ increase in average temperatures worldwide. This phenomenon (4)_____ various adverse effects on the environment, including (5)_____ weather patterns and rising sea levels.

SubQuestion No : 72

Q.72 Select the most appropriate option to fill in blank number 2.

- Ans
- ☒ 1. extraction
 - ☒ 2. production
 - ☒ 3. reduction
 - ☒ 4. emission

Question ID : 264330164679

Option 1 ID : 264330645885

Option 2 ID : 264330645886

Option 3 ID : 264330645884

Option 4 ID : 264330645883

Status : Answered

Chosen Option : 4

Comprehension:

In the following passage, some words have been deleted. Read the passage carefully and select the most appropriate option to fill in each blank.

Global warming is a significant (1)_____ issue that requires immediate attention. The (2)_____ of greenhouse gases in the atmosphere has led to a (3)_____ increase in average temperatures worldwide. This phenomenon (4)_____ various adverse effects on the environment, including (5)_____ weather patterns and rising sea levels.

SubQuestion No : 73

Q.73 Select the most appropriate option to fill in blank number 3.

- Ans
- ☒ 1. ineffective
 - ☒ 2. gradual
 - ☒ 3. large
 - ☒ 4. temporary

Question ID : 264330164680

Option 1 ID : 264330645889

Option 2 ID : 264330645887

Option 3 ID : 264330645890

Option 4 ID : 264330645888

Status : Answered

Chosen Option : 2

Comprehension:

In the following passage, some words have been deleted. Read the passage carefully and select the most appropriate option to fill in each blank.

Global warming is a significant (1)_____ issue that requires immediate attention. The (2)_____ of greenhouse gases in the atmosphere has led to a (3)_____ increase in average temperatures worldwide. This phenomenon (4)_____ various adverse effects on the environment, including (5)_____ weather patterns and rising sea levels.

SubQuestion No : 74

Q.74 Select the most appropriate option to fill in blank number 4.

Ans ☒ 1. causes

☐ 2. results

☐ 3. contributes

☐ 4. prevents

Question ID : 264330164681

Option 1 ID : 264330645892

Option 2 ID : 264330645891

Option 3 ID : 264330645893

Option 4 ID : 264330645894

Status : Answered

Chosen Option : 1

Comprehension:

In the following passage, some words have been deleted. Read the passage carefully and select the most appropriate option to fill in each blank.

Global warming is a significant (1)_____ issue that requires immediate attention. The (2)_____ of greenhouse gases in the atmosphere has led to a (3)_____ increase in average temperatures worldwide. This phenomenon (4)_____ various adverse effects on the environment, including (5)_____ weather patterns and rising sea levels.

SubQuestion No : 75

Q.75 Select the most appropriate option to fill in blank number 5.

Ans ☐ 1. predictable

☐ 2. stable

☐ 3. constant

☒ 4. erratic

Question ID : 264330164682

Option 1 ID : 264330645898

Option 2 ID : 264330645895

Option 3 ID : 264330645896

Option 4 ID : 264330645897

Status : Answered

Chosen Option : 4

Comprehension:

In the following passage, some words have been deleted. Read the passage carefully and select the most appropriate option to fill in each blank.

Necessity is an (1) _____ force that compels a man to do things. It stirs the mind so (2) _____ that it causes great unrest that continues until the necessity is (3) _____. As order comes out of (4) _____ chaos so does an invention out of some (5) _____.

SubQuestion No : 76

Q.76 Select the most appropriate option to fill in blank No. 1.

- Ans ☒ 1. inconceivable
☒ 2. irresistible
☒ 3. essential
☒ 4. unpredictable

Question ID : 264330166468

Option 1 ID : 264330652915

Option 2 ID : 264330652916

Option 3 ID : 264330652918

Option 4 ID : 264330652917

Status : Answered

Chosen Option : 3

Comprehension:

In the following passage, some words have been deleted. Read the passage carefully and select the most appropriate option to fill in each blank.

Necessity is an (1) _____ force that compels a man to do things. It stirs the mind so (2) _____ that it causes great unrest that continues until the necessity is (3) _____. As order comes out of (4) _____ chaos so does an invention out of some (5) _____.

SubQuestion No : 77

Q.77 Select the most appropriate option to fill in blank No. 2.

- Ans ☒ 1. gracefully
☒ 2. slowly
☒ 3. massively
☒ 4. violently

Question ID : 264330166469

Option 1 ID : 264330652919

Option 2 ID : 264330652921

Option 3 ID : 264330652922

Option 4 ID : 264330652920

Status : Answered

Chosen Option : 4

Comprehension:

In the following passage, some words have been deleted. Read the passage carefully and select the most appropriate option to fill in each blank.

Necessity is an (1)_____ force that compels a man to do things. It stirs the mind so (2)_____ that it causes great unrest that continues until the necessity is (3) _____. As order comes out of (4) _____ chaos so does an invention out of some (5) _____.

SubQuestion No : 78

Q.78 Select the most appropriate option to fill in blank No. 3.

- Ans
- ☒ 1. concerned
 - ☒ 2. committed
 - ☒ 3. fulfilled
 - ☒ 4. perturbed

Question ID : 264330166470

Option 1 ID : 264330652926

Option 2 ID : 264330652925

Option 3 ID : 264330652923

Option 4 ID : 264330652924

Status : Answered

Chosen Option : 3

Comprehension:

In the following passage, some words have been deleted. Read the passage carefully and select the most appropriate option to fill in each blank.

Necessity is an (1)_____ force that compels a man to do things. It stirs the mind so (2)_____ that it causes great unrest that continues until the necessity is (3) _____. As order comes out of (4) _____ chaos so does an invention out of some (5) _____.

SubQuestion No : 79

Q.79 Select the most appropriate option to fill in blank No. 4.

- Ans
- ☒ 1. perfect
 - ☒ 2. analytical
 - ☒ 3. utter
 - ☒ 4. least

Question ID : 264330166471

Option 1 ID : 264330652929

Option 2 ID : 264330652930

Option 3 ID : 264330652927

Option 4 ID : 264330652928

Status : Answered

Chosen Option : 3

Comprehension:

In the following passage, some words have been deleted. Read the passage carefully and select the most appropriate option to fill in each blank.

Necessity is an (1) _____ force that compels a man to do things. It stirs the mind so (2) _____ that it causes great unrest that continues until the necessity is (3) _____. As order comes out of (4) _____ chaos so does an invention out of some (5) _____.

SubQuestion No : 80

Q.80 Select the most appropriate option to fill in blank No. 5.

- Ans ☒ 1. necessity
☒ 2. abstrusity
☒ 3. amity
☒ 4. ability

Question ID : 264330166472

Option 1 ID : 264330652933

Option 2 ID : 264330652932

Option 3 ID : 264330652934

Option 4 ID : 264330652931

Status : Answered

Chosen Option : 2

Comprehension:

In the following passage some words have been deleted. Read the passage carefully and select the most appropriate option to fill in each blank.

Fire is a significant factor in human (1) _____. The Stone Age man was the first to discover and use fire, which provided him (2) _____ and a means to cook food. Initially, he produced fire by rubbing two stones, and the (3) _____ between two stones generated fire. But this process was very (4) _____ and he wanted to discover a less laborious way of producing fire. For this he had to first preserve the fire. He discovered a fire band and carried it everywhere. This discovery led to the invention of torches and lamps that could be used for (5) _____, and preserving flame. So, we can say that fire is an accidental invention.

SubQuestion No : 81

Q.81 Select the most appropriate option to fill in blank number 1.

- Ans ☒ 1. recession
☒ 2. rotation
☒ 3. regression
☒ 4. evolution

Question ID : 264330168070

Option 1 ID : 264330659161

Option 2 ID : 264330659162

Option 3 ID : 264330659159

Option 4 ID : 264330659160

Status : Answered

Chosen Option : 4

Comprehension:

In the following passage some words have been deleted. Read the passage carefully and select the most appropriate option to fill in each blank.

Fire is a significant factor in human (1) _____. The Stone Age man was the first to discover and use fire, which provided him (2) _____ and a means to cook food. Initially, he produced fire by rubbing two stones, and the (3) _____ between two stones generated fire. But this process was very (4) _____ and he wanted to discover a less laborious way of producing fire. For this he had to first preserve the fire. He discovered a fire band and carried it everywhere. This discovery led to the invention of torches and lamps that could be used for (5) _____, and preserving flame. So, we can say that fire is an accidental invention.

SubQuestion No : 82

Q.82 Select the most appropriate option to fill in blank number 2.

- Ans
- ☒ 1. coldness
 - ☒ 2. warm
 - ☒ 3. hot
 - ☒ 4. warmth

Question ID : 264330168071

Option 1 ID : 264330659166

Option 2 ID : 264330659164

Option 3 ID : 264330659165

Option 4 ID : 264330659163

Status : Answered

Chosen Option : 4

Comprehension:

In the following passage some words have been deleted. Read the passage carefully and select the most appropriate option to fill in each blank.

Fire is a significant factor in human (1) _____. The Stone Age man was the first to discover and use fire, which provided him (2) _____ and a means to cook food. Initially, he produced fire by rubbing two stones, and the (3) _____ between two stones generated fire. But this process was very (4) _____ and he wanted to discover a less laborious way of producing fire. For this he had to first preserve the fire. He discovered a fire band and carried it everywhere. This discovery led to the invention of torches and lamps that could be used for (5) _____, and preserving flame. So, we can say that fire is an accidental invention.

SubQuestion No : 83

Q.83 Select the most appropriate option to fill in blank number 3.

- Ans
- ☒ 1. friction
 - ☒ 2. retraction
 - ☒ 3. cohesion
 - ☒ 4. smoothness

Question ID : 264330168072

Option 1 ID : 264330659170

Option 2 ID : 264330659167

Option 3 ID : 264330659168

Option 4 ID : 264330659169

Status : Answered

Chosen Option : 1

Comprehension:

In the following passage some words have been deleted. Read the passage carefully and select the most appropriate option to fill in each blank.

Fire is a significant factor in human (1) _____. The Stone Age man was the first to discover and use fire, which provided him (2) _____ and a means to cook food. Initially, he produced fire by rubbing two stones, and the (3) _____ between two stones generated fire. But this process was very (4) _____ and he wanted to discover a less laborious way of producing fire. For this he had to first preserve the fire. He discovered a fire band and carried it everywhere. This discovery led to the invention of torches and lamps that could be used for (5) _____, and preserving flame. So, we can say that fire is an accidental invention.

SubQuestion No : 84

Q.84 Select the most appropriate option to fill in blank number 4.

- Ans ☒ 1. cumbersome
☐ 2. manageable
☐ 3. uncontainable
☐ 4. controllable

Question ID : 264330168073

Option 1 ID : 264330659171

Option 2 ID : 264330659172

Option 3 ID : 264330659174

Option 4 ID : 264330659173

Status : Answered

Chosen Option : 3

Comprehension:

In the following passage some words have been deleted. Read the passage carefully and select the most appropriate option to fill in each blank.

Fire is a significant factor in human (1) _____. The Stone Age man was the first to discover and use fire, which provided him (2) _____ and a means to cook food. Initially, he produced fire by rubbing two stones, and the (3) _____ between two stones generated fire. But this process was very (4) _____ and he wanted to discover a less laborious way of producing fire. For this he had to first preserve the fire. He discovered a fire band and carried it everywhere. This discovery led to the invention of torches and lamps that could be used for (5) _____, and preserving flame. So, we can say that fire is an accidental invention.

SubQuestion No : 85

Q.85 Select the most appropriate option to fill in blank number 5.

- Ans ☐ 1. darkness
☒ 2. illumination
☐ 3. dullness
☐ 4. confusion

Question ID : 264330168074

Option 1 ID : 264330659177

Option 2 ID : 264330659176

Option 3 ID : 264330659178

Option 4 ID : 264330659175

Status : Answered

Chosen Option : 2

Comprehension:

Read the given passage and answer the question that follows.

Sustainable utensils are proving to be a crucial tool in our collective efforts towards building a greener and more environmentally conscious world. These utensils, often made from renewable resources such as bamboo or plant-based materials like cornstarch, offer a myriad of benefits. Firstly, sustainable utensils significantly reduce our reliance on single-use plastics. Plastic cutlery, traditionally used for convenience, contributes to the vast amounts of waste that end up in landfills and oceans, polluting ecosystems and harming marine life. By switching to sustainable alternatives, we can minimise this environmental damage. Secondly, sustainable utensils are biodegradable or compostable, meaning they can break down naturally over time. This ensures that even if they do end up in landfills, they won't persist for centuries like plastic does. Instead, they return to the Earth without leaving a lasting negative impact. These utensils can be reused multiple times, further reducing waste. Many sustainable options are durable and washable, making them a viable long-term solution.

SubQuestion No : 86

Q.86 What is the main focus of the passage?

- Ans
- ☒ 1. The benefits and harms of single-use plastic
 - ☒ 2. The economic benefits of sustainable utensils
 - ☒ 3. The importance of sustainable alternatives
 - ☒ 4. The environmental benefits of the sustainable utensils

Question ID : 264330169890

Option 1 ID : 264330666238

Option 2 ID : 264330666237

Option 3 ID : 264330666235

Option 4 ID : 264330666236

Status : Answered

Chosen Option : 1

Comprehension:

Read the given passage and answer the question that follows.

Sustainable utensils are proving to be a crucial tool in our collective efforts towards building a greener and more environmentally conscious world. These utensils, often made from renewable resources such as bamboo or plant-based materials like cornstarch, offer a myriad of benefits. Firstly, sustainable utensils significantly reduce our reliance on single-use plastics. Plastic cutlery, traditionally used for convenience, contributes to the vast amounts of waste that end up in landfills and oceans, polluting ecosystems and harming marine life. By switching to sustainable alternatives, we can minimise this environmental damage. Secondly, sustainable utensils are biodegradable or compostable, meaning they can break down naturally over time. This ensures that even if they do end up in landfills, they won't persist for centuries like plastic does. Instead, they return to the Earth without leaving a lasting negative impact. These utensils can be reused multiple times, further reducing waste. Many sustainable options are durable and washable, making them a viable long-term solution.

SubQuestion No : 87

Q.87 What distinguishes sustainable utensils from plastic cutlery?

- Ans
- ☒ 1. They have a lower environmental impact
 - ☒ 2. They are more expensive
 - ☒ 3. They have a shorter lifespan
 - ☒ 4. They are made from non-renewable resources

Question ID : 264330169892

Option 1 ID : 264330666246

Option 2 ID : 264330666243

Option 3 ID : 264330666245

Option 4 ID : 264330666244

Status : Answered

Chosen Option : 1

Comprehension:

Read the given passage and answer the question that follows.

Sustainable utensils are proving to be a crucial tool in our collective efforts towards building a greener and more environmentally conscious world. These utensils, often made from renewable resources such as bamboo or plant-based materials like cornstarch, offer a myriad of benefits. Firstly, sustainable utensils significantly reduce our reliance on single-use plastics. Plastic cutlery, traditionally used for convenience, contributes to the vast amounts of waste that end up in landfills and oceans, polluting ecosystems and harming marine life. By switching to sustainable alternatives, we can minimise this environmental damage. Secondly, sustainable utensils are biodegradable or compostable, meaning they can break down naturally over time. This ensures that even if they do end up in landfills, they won't persist for centuries like plastic does. Instead, they return to the Earth without leaving a lasting negative impact. These utensils can be reused multiple times, further reducing waste. Many sustainable options are durable and washable, making them a viable long-term solution.

SubQuestion No : 88

Q.88 Based on the information provided in the passage, which among the following is NOT an example of sustainable utensil?

- Ans
- ☒ 1. Bioplastic cutlery
 - ☒ 2. Edible cutlery
 - ☒ 3. Wooden cutlery
 - ☒ 4. Plastic cutlery

Question ID : 264330169894

Option 1 ID : 264330666252

Option 2 ID : 264330666253

Option 3 ID : 264330666251

Option 4 ID : 264330666254

Status : Answered

Chosen Option : 4

Comprehension:

Read the given passage and answer the question that follows.

Sustainable utensils are proving to be a crucial tool in our collective efforts towards building a greener and more environmentally conscious world. These utensils, often made from renewable resources such as bamboo or plant-based materials like cornstarch, offer a myriad of benefits. Firstly, sustainable utensils significantly reduce our reliance on single-use plastics. Plastic cutlery, traditionally used for convenience, contributes to the vast amounts of waste that end up in landfills and oceans, polluting ecosystems and harming marine life. By switching to sustainable alternatives, we can minimise this environmental damage. Secondly, sustainable utensils are biodegradable or compostable, meaning they can break down naturally over time. This ensures that even if they do end up in landfills, they won't persist for centuries like plastic does. Instead, they return to the Earth without leaving a lasting negative impact. These utensils can be reused multiple times, further reducing waste. Many sustainable options are durable and washable, making them a viable long-term solution.

SubQuestion No : 89

Q.89 Which materials are commonly used to make sustainable utensils?

- Ans
- ☒ 1. Bamboo and cornstarch
 - ☒ 2. Ceramic and wood
 - ☒ 3. Plastic and aluminium
 - ☒ 4. Metal and glass

Question ID : 264330169891

Option 1 ID : 264330666241

Option 2 ID : 264330666240

Option 3 ID : 264330666242

Option 4 ID : 264330666239

Status : Answered

Chosen Option : 1

Comprehension:

Read the given passage and answer the question that follows.

Sustainable utensils are proving to be a crucial tool in our collective efforts towards building a greener and more environmentally conscious world. These utensils, often made from renewable resources such as bamboo or plant-based materials like cornstarch, offer a myriad of benefits. Firstly, sustainable utensils significantly reduce our reliance on single-use plastics. Plastic cutlery, traditionally used for convenience, contributes to the vast amounts of waste that end up in landfills and oceans, polluting ecosystems and harming marine life. By switching to sustainable alternatives, we can minimise this environmental damage. Secondly, sustainable utensils are biodegradable or compostable, meaning they can break down naturally over time. This ensures that even if they do end up in landfills, they won't persist for centuries like plastic does. Instead, they return to the Earth without leaving a lasting negative impact. These utensils can be reused multiple times, further reducing waste. Many sustainable options are durable and washable, making them a viable long-term solution.

SubQuestion No : 90

Q.90 Which of the following is NOT a characteristic of sustainable utensils?

- Ans ☒ 1. Reusability
☒ 2. Non-recyclability
☒ 3. Durability
☒ 4. Biodegradability

Question ID : **264330169893**

Option 1 ID : **264330666250**

Option 2 ID : **264330666248**

Option 3 ID : **264330666249**

Option 4 ID : **264330666247**

Status : **Answered**

Chosen Option : **2**

Comprehension:

Read the given passage and answer the questions that follow.

Cybercrime refers to any illegal activity that involves the use of technology or computer networks. As technology continues to advance and more people depend on it for their daily lives, the threat of cybercrime becomes more prevalent. Cybercriminals can carry out various types of attacks, including hacking, phishing, ransomware attacks and identity theft.

One of the most common forms of cybercrime is hacking, where a cybercriminal gains unauthorised access to a computer system or network. This type of attack can be particularly devastating, as it can give the hacker access to sensitive information such as financial data, personal information or intellectual property. Cybercriminals can also use malware to infiltrate systems, steal information or cause damage to the network.

Phishing is another common form of cybercrime that involves tricking people into providing personal information or login credentials. Cybercriminals will often create fake websites or emails that look legitimate to convince users to give up their information. These attacks can be very effective because they often target people's trust in legitimate businesses or institutions.

Ransomware attacks have become increasingly prevalent in recent years, where cybercriminals use malware to lock a victim's computer or files until a ransom is paid. This type of attack can be particularly damaging for businesses, as it can result in lost revenue, damage to reputation and a disruption in operations.

Identity theft is another major form of cybercrime, where cybercriminals steal someone's personal information to access financial accounts, apply for credit or commit other crimes in their name. This can be particularly damaging for individuals, as it can take months or even years to fully recover from the damage.

Cybercrime is a global problem that affects individuals, businesses and governments alike. It can cause significant financial losses, damage to reputation and disruptions to daily life. To combat cybercrime, individuals and organisations must take proactive measures to protect themselves, including using strong passwords, keeping software up to date and being cautious when opening emails or clicking links.

Governments and law enforcement agencies also have a role to play in combatting cybercrime. They can work to strengthen cybersecurity laws, increase funding for cybersecurity initiatives and collaborate with international partners to investigate and prosecute cybercriminals.

Overall, cybercrime is a complex and ever-evolving problem requiring a multi-faceted approach. By taking proactive measures and working together, we can reduce the threat of cybercrime and protect ourselves and our communities from its damaging effects.

SubQuestion No : 91

Q.91 Which of the following are facts given in the passage?

Ans ✓ 1. Hacking is a type of cybercrime that can give hackers access to sensitive information.

✗ 2. Phishing is a type of cybercrime that involves locking a victim's computer or files until a ransom is paid.

✗ 3. Identity theft cannot result in significant financial losses.

✗ 4. Cybercrime only affects individuals and not businesses.

Question ID : 264330166399

Option 1 ID : 264330652644

Option 2 ID : 264330652645

Option 3 ID : 264330652646

Option 4 ID : 264330652643

Status : Answered

Chosen Option : 1

Comprehension:

Read the given passage and answer the questions that follow.

Cybercrime refers to any illegal activity that involves the use of technology or computer networks. As technology continues to advance and more people depend on it for their daily lives, the threat of cybercrime becomes more prevalent. Cybercriminals can carry out various types of attacks, including hacking, phishing, ransomware attacks and identity theft.

One of the most common forms of cybercrime is hacking, where a cybercriminal gains unauthorised access to a computer system or network. This type of attack can be particularly devastating, as it can give the hacker access to sensitive information such as financial data, personal information or intellectual property. Cybercriminals can also use malware to infiltrate systems, steal information or cause damage to the network.

Phishing is another common form of cybercrime that involves tricking people into providing personal information or login credentials. Cybercriminals will often create fake websites or emails that look legitimate to convince users to give up their information. These attacks can be very effective because they often target people's trust in legitimate businesses or institutions.

Ransomware attacks have become increasingly prevalent in recent years, where cybercriminals use malware to lock a victim's computer or files until a ransom is paid. This type of attack can be particularly damaging for businesses, as it can result in lost revenue, damage to reputation and a disruption in operations.

Identity theft is another major form of cybercrime, where cybercriminals steal someone's personal information to access financial accounts, apply for credit or commit other crimes in their name. This can be particularly damaging for individuals, as it can take months or even years to fully recover from the damage.

Cybercrime is a global problem that affects individuals, businesses and governments alike. It can cause significant financial losses, damage to reputation and disruptions to daily life. To combat cybercrime, individuals and organisations must take proactive measures to protect themselves, including using strong passwords, keeping software up to date and being cautious when opening emails or clicking links.

Governments and law enforcement agencies also have a role to play in combatting cybercrime. They can work to strengthen cybersecurity laws, increase funding for cybersecurity initiatives and collaborate with international partners to investigate and prosecute cybercriminals.

Overall, cybercrime is a complex and ever-evolving problem requiring a multi-faceted approach. By taking proactive measures and working together, we can reduce the threat of cybercrime and protect ourselves and our communities from its damaging effects.

SubQuestion No : 92

Q.92 Which of the following can be inferred from the passage?

- Ans
- ☒ 1. Cybercrime is a problem that only affects individuals and businesses.
 - ☒ 2. Cybersecurity measures cannot alone prevent all forms of cybercrime.
 - ☒ 3. Cybercriminals use phishing attacks to gain access to financial information.
 - ☒ 4. Ransomware attacks are the most common form of cybercrime.

Question ID : 264330166400

Option 1 ID : 264330652647

Option 2 ID : 264330652650

Option 3 ID : 264330652649

Option 4 ID : 264330652648

Status : Answered

Chosen Option : 4

Comprehension:

Read the given passage and answer the questions that follow.

Cybercrime refers to any illegal activity that involves the use of technology or computer networks. As technology continues to advance and more people depend on it for their daily lives, the threat of cybercrime becomes more prevalent. Cybercriminals can carry out various types of attacks, including hacking, phishing, ransomware attacks and identity theft.

One of the most common forms of cybercrime is hacking, where a cybercriminal gains unauthorised access to a computer system or network. This type of attack can be particularly devastating, as it can give the hacker access to sensitive information such as financial data, personal information or intellectual property. Cybercriminals can also use malware to infiltrate systems, steal information or cause damage to the network.

Phishing is another common form of cybercrime that involves tricking people into providing personal information or login credentials. Cybercriminals will often create fake websites or emails that look legitimate to convince users to give up their information. These attacks can be very effective because they often target people's trust in legitimate businesses or institutions.

Ransomware attacks have become increasingly prevalent in recent years, where cybercriminals use malware to lock a victim's computer or files until a ransom is paid. This type of attack can be particularly damaging for businesses, as it can result in lost revenue, damage to reputation and a disruption in operations.

Identity theft is another major form of cybercrime, where cybercriminals steal someone's personal information to access financial accounts, apply for credit or commit other crimes in their name. This can be particularly damaging for individuals, as it can take months or even years to fully recover from the damage.

Cybercrime is a global problem that affects individuals, businesses and governments alike. It can cause significant financial losses, damage to reputation and disruptions to daily life. To combat cybercrime, individuals and organisations must take proactive measures to protect themselves, including using strong passwords, keeping software up to date and being cautious when opening emails or clicking links.

Governments and law enforcement agencies also have a role to play in combatting cybercrime. They can work to strengthen cybersecurity laws, increase funding for cybersecurity initiatives and collaborate with international partners to investigate and prosecute cybercriminals.

Overall, cybercrime is a complex and ever-evolving problem requiring a multi-faceted approach. By taking proactive measures and working together, we can reduce the threat of cybercrime and protect ourselves and our communities from its damaging effects.

SubQuestion No : 93

Q.93 Which of the following best describes the tone of the passage?

- Ans
- ☒ 1. Sarcastic
 - ☒ 2. Humorous
 - ☒ 3. Informative
 - ☒ 4. Confrontational

Question ID : 264330166401

Option 1 ID : 264330652652

Option 2 ID : 264330652654

Option 3 ID : 264330652651

Option 4 ID : 264330652653

Status : Answered

Chosen Option : 3

Comprehension:

Read the given passage and answer the questions that follow.

Cybercrime refers to any illegal activity that involves the use of technology or computer networks. As technology continues to advance and more people depend on it for their daily lives, the threat of cybercrime becomes more prevalent. Cybercriminals can carry out various types of attacks, including hacking, phishing, ransomware attacks and identity theft.

One of the most common forms of cybercrime is hacking, where a cybercriminal gains unauthorised access to a computer system or network. This type of attack can be particularly devastating, as it can give the hacker access to sensitive information such as financial data, personal information or intellectual property. Cybercriminals can also use malware to infiltrate systems, steal information or cause damage to the network.

Phishing is another common form of cybercrime that involves tricking people into providing personal information or login credentials. Cybercriminals will often create fake websites or emails that look legitimate to convince users to give up their information. These attacks can be very effective because they often target people's trust in legitimate businesses or institutions.

Ransomware attacks have become increasingly prevalent in recent years, where cybercriminals use malware to lock a victim's computer or files until a ransom is paid. This type of attack can be particularly damaging for businesses, as it can result in lost revenue, damage to reputation and a disruption in operations.

Identity theft is another major form of cybercrime, where cybercriminals steal someone's personal information to access financial accounts, apply for credit or commit other crimes in their name. This can be particularly damaging for individuals, as it can take months or even years to fully recover from the damage.

Cybercrime is a global problem that affects individuals, businesses and governments alike. It can cause significant financial losses, damage to reputation and disruptions to daily life. To combat cybercrime, individuals and organisations must take proactive measures to protect themselves, including using strong passwords, keeping software up to date and being cautious when opening emails or clicking links.

Governments and law enforcement agencies also have a role to play in combatting cybercrime. They can work to strengthen cybersecurity laws, increase funding for cybersecurity initiatives and collaborate with international partners to investigate and prosecute cybercriminals.

Overall, cybercrime is a complex and ever-evolving problem requiring a multi-faceted approach. By taking proactive measures and working together, we can reduce the threat of cybercrime and protect ourselves and our communities from its damaging effects.

SubQuestion No : 94

Q.94 What is phishing ?

- Ans
- ☒ 1. Phishing involves hacking into a computer system and stealing sensitive information.
 - ☒ 2. Phishing is a type of identity theft where cybercriminals steal someone's personal information to access financial accounts.
 - ☒ 3. Phishing is a type of malware that locks a victim's computer or files until a ransom is paid.
 - ☒ 4. Phishing involves tricking people into providing personal information or login credentials.

Question ID : 264330166402

Option 1 ID : 264330652655

Option 2 ID : 264330652658

Option 3 ID : 264330652656

Option 4 ID : 264330652657

Status : Answered

Chosen Option : 4

Comprehension:

Read the given passage and answer the questions that follow.

Cybercrime refers to any illegal activity that involves the use of technology or computer networks. As technology continues to advance and more people depend on it for their daily lives, the threat of cybercrime becomes more prevalent. Cybercriminals can carry out various types of attacks, including hacking, phishing, ransomware attacks and identity theft.

One of the most common forms of cybercrime is hacking, where a cybercriminal gains unauthorised access to a computer system or network. This type of attack can be particularly devastating, as it can give the hacker access to sensitive information such as financial data, personal information or intellectual property. Cybercriminals can also use malware to infiltrate systems, steal information or cause damage to the network.

Phishing is another common form of cybercrime that involves tricking people into providing personal information or login credentials. Cybercriminals will often create fake websites or emails that look legitimate to convince users to give up their information. These attacks can be very effective because they often target people's trust in legitimate businesses or institutions.

Ransomware attacks have become increasingly prevalent in recent years, where cybercriminals use malware to lock a victim's computer or files until a ransom is paid. This type of attack can be particularly damaging for businesses, as it can result in lost revenue, damage to reputation and a disruption in operations.

Identity theft is another major form of cybercrime, where cybercriminals steal someone's personal information to access financial accounts, apply for credit or commit other crimes in their name. This can be particularly damaging for individuals, as it can take months or even years to fully recover from the damage.

Cybercrime is a global problem that affects individuals, businesses and governments alike. It can cause significant financial losses, damage to reputation and disruptions to daily life. To combat cybercrime, individuals and organisations must take proactive measures to protect themselves, including using strong passwords, keeping software up to date and being cautious when opening emails or clicking links.

Governments and law enforcement agencies also have a role to play in combatting cybercrime. They can work to strengthen cybersecurity laws, increase funding for cybersecurity initiatives and collaborate with international partners to investigate and prosecute cybercriminals.

Overall, cybercrime is a complex and ever-evolving problem requiring a multi-faceted approach. By taking proactive measures and working together, we can reduce the threat of cybercrime and protect ourselves and our communities from its damaging effects.

SubQuestion No : 95

Q.95 Which of the following is the most appropriate title for the passage?

- Ans
- ☐ 1. The Global Problem of Cybercrime
 - ☐ 2. The Role of Governments in Combatting Cybercrime
 - ☒ 3. Types of Cybercrime and Their Effects
 - ☐ 4. Cybersecurity Measures for Individuals and Organisations

Question ID : 264330166398

Option 1 ID : 264330652642

Option 2 ID : 264330652641

Option 3 ID : 264330652640

Option 4 ID : 264330652639

Status : Answered

Chosen Option : 3

Comprehension:

Read the given passage and answer the questions that follow.

In a study, the University of Colorado in Denver observed a group of nurses who visited pregnant mothers. After the women gave birth, the nurses made approximately twenty visits before the children turned two years old. When the benefits to the children were studied, the researchers found that the children were emotionally less vulnerable to fear. The children learned languages sooner. They also had higher mental development scores than the control group without the nurses' support. The benefits to the children because of this simple intervention of the nurses' support were observed even fifteen years later.

SubQuestion No : 96

Q.96 What is the style of the passage?

- Ans
- ☒ 1. Narrative
 - ☒ 2. Descriptive
 - ☒ 3. Expository
 - ☒ 4. Classification

Question ID : 264330167934

Option 1 ID : 264330658639

Option 2 ID : 264330658640

Option 3 ID : 264330658642

Option 4 ID : 264330658641

Status : Answered

Chosen Option : 2

Comprehension:

Read the given passage and answer the questions that follow.

In a study, the University of Colorado in Denver observed a group of nurses who visited pregnant mothers. After the women gave birth, the nurses made approximately twenty visits before the children turned two years old. When the benefits to the children were studied, the researchers found that the children were emotionally less vulnerable to fear. The children learned languages sooner. They also had higher mental development scores than the control group without the nurses' support. The benefits to the children because of this simple intervention of the nurses' support were observed even fifteen years later.

SubQuestion No : 97

Q.97 Which statement best summarises the passage?

- Ans
- ☒ 1. Study on nurses have impact even after fifteen years.
 - ☒ 2. Nurses should visit pregnant mothers regularly.
 - ☒ 3. Pregnant women are emotionally less vulnerable to fear.
 - ☒ 4. Community support is vital in the emotional development of a child.

Question ID : 264330167933

Option 1 ID : 264330658638

Option 2 ID : 264330658635

Option 3 ID : 264330658637

Option 4 ID : 264330658636

Status : Answered

Chosen Option : 4

Comprehension:

Read the given passage and answer the questions that follow.

In a study, the University of Colorado in Denver observed a group of nurses who visited pregnant mothers. After the women gave birth, the nurses made approximately twenty visits before the children turned two years old. When the benefits to the children were studied, the researchers found that the children were emotionally less vulnerable to fear. The children learned languages sooner. They also had higher mental development scores than the control group without the nurses' support. The benefits to the children because of this simple intervention of the nurses' support were observed even fifteen years later.

SubQuestion No : 98

Q.98 Select the most appropriate **ANTONYM** of the given word.
Unsusceptible

- Ans**
- ☒ 1. Vulnerable
 - ☐ 2. Development
 - ☐ 3. Approximately
 - ☐ 4. Intervention

Question ID : **264330167935**

Option 1 ID : **264330658644**

Option 2 ID : **264330658645**

Option 3 ID : **264330658643**

Option 4 ID : **264330658646**

Status : **Answered**

Chosen Option : **1**

Comprehension:

Read the given passage and answer the questions that follow.

In a study, the University of Colorado in Denver observed a group of nurses who visited pregnant mothers. After the women gave birth, the nurses made approximately twenty visits before the children turned two years old. When the benefits to the children were studied, the researchers found that the children were emotionally less vulnerable to fear. The children learned languages sooner. They also had higher mental development scores than the control group without the nurses' support. The benefits to the children because of this simple intervention of the nurses' support were observed even fifteen years later.

SubQuestion No : 99

Q.99 What is the most suitable title of the passage?

- Ans**
- ☐ 1. Pregnant Mothers and Nurses
 - ☒ 2. Social Support and its Benefits
 - ☐ 3. Intervention of the Nurses
 - ☐ 4. Control Group and Nurses

Question ID : **264330167932**

Option 1 ID : **264330658631**

Option 2 ID : **264330658633**

Option 3 ID : **264330658632**

Option 4 ID : **264330658634**

Status : **Answered**

Chosen Option : **2**

Comprehension:

Read the given passage and answer the questions that follow.

In a study, the University of Colorado in Denver observed a group of nurses who visited pregnant mothers. After the women gave birth, the nurses made approximately twenty visits before the children turned two years old. When the benefits to the children were studied, the researchers found that the children were emotionally less vulnerable to fear. The children learned languages sooner. They also had higher mental development scores than the control group without the nurses' support. The benefits to the children because of this simple intervention of the nurses' support were observed even fifteen years later.

SubQuestion No : 100

Q.100 What can one infer from the passage?

- Ans** ☒ 1. The community plays an important role in offering social support to mothers.
- ☐ 2. Some children learn languages quickly.
- ☐ 3. Control group without nurses' support have relatively elevated mental development.
- ☐ 4. Nurses' intervention reduce vulnerability to fear in pregnant mothers.

Question ID : **264330167936**

Option 1 ID : **264330658648**

Option 2 ID : **264330658647**

Option 3 ID : **264330658649**

Option 4 ID : **264330658650**

Status : **Answered**

Chosen Option : **1**