

Stenographer Grade C and D Examination 2023

Roll Number	
Candidate Name	
Venue Name	
Exam Date	12/10/2023
Exam Time	4:30 PM - 6:30 PM
Subject	Stenographer Grade C and D Examination 2023

Section : General Intelligence and Reasoning

Q.1 Which figure should replace the question mark (?) in the following series to continue the pattern?

P	P	L	L	?
A	3	3	O	
O L 3	A O L	P A O	3 P A	

Ans

✗ 1.

A
L
O 3 P

✓ 2.

A
O
L 3 P

✗ 3.

O
A
L 3 P

✗ 4.

L
A
O 3 P

Question ID : 264330129593

Option 1 ID : 264330507739

Option 2 ID : 264330507740

Option 3 ID : 264330507741

Option 4 ID : 264330507738

Status : Answered

Chosen Option : 2

Q.2 Select the option that is related to the fifth number in the same way as the second number is related to the first number and the fourth number is related to the third number.

15 : 145 :: 10 : 95 :: 20 : ?

- Ans
- ☒ 1. 205
 - ☒ 2. 190
 - ☒ 3. 195
 - ☒ 4. 200

Question ID : 26433089553
Option 1 ID : 264330351716
Option 2 ID : 264330351713
Option 3 ID : 264330351714
Option 4 ID : 264330351715
Status : Answered
Chosen Option : 3

Q.3 In a certain code language, 'COFFEE' is written as 'FTKKJH' and 'EXPERT' is written as 'HCUJWW'. How will 'FRENCH' be written in that language?

- Ans
- ☒ 1. IWJSHK
 - ☒ 2. TWWSHK
 - ☒ 3. TWJMGL
 - ☒ 4. JXWTHL

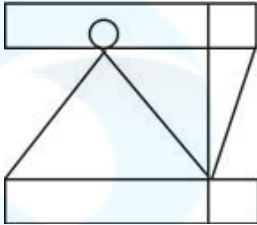
Question ID : 26433082560
Option 1 ID : 264330324075
Option 2 ID : 264330324073
Option 3 ID : 264330324074
Option 4 ID : 264330324076
Status : Answered
Chosen Option : 1

Q.4 Select the option in which the given figure is embedded (rotation is NOT allowed).

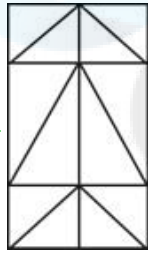


Ans

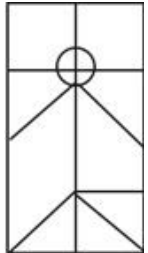
✗ 1.



✓ 2.



✗ 3.



✗ 4.



Question ID : 26433011654

Option 1 ID : 264330438704

Option 2 ID : 264330438701

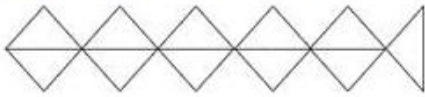
Option 3 ID : 264330438702

Option 4 ID : 264330438703

Status : Answered

Chosen Option : 2

Q.5 How many triangles are there in the given figure?



Ans ☒ 1. 11

☐ 2. 12

☐ 3. 10

☐ 4. 9

Question ID : 26433068629

Option 1 ID : 264330269028

Option 2 ID : 264330269029

Option 3 ID : 264330269031

Option 4 ID : 264330269030

Status : Answered

Chosen Option : 1

Q.6 Select the set in which the numbers are related in the same way as are the numbers of the given set. (NOTE: Operations should be performed on the whole numbers, without breaking down the numbers into its constituent digits. E.g. 13 – Operations on 13 such as adding /deleting /multiplying etc. to 13 can be performed. Breaking down 13 into 1 and 3 and then performing mathematical operations on 1 and 3 is not allowed.)
(7, 17, 35)
(5, 11, 23)

Ans ☒ 1. (9, 23, 47)

☐ 2. (10, 26, 54)

☐ 3. (8, 20, 39)

☐ 4. (11, 29, 58)

Question ID : 26433078962

Option 1 ID : 264330309861

Option 2 ID : 264330309862

Option 3 ID : 264330309863

Option 4 ID : 264330309860

Status : Answered

Chosen Option : 1

Q.7 If '+' means '÷', '-' means '+', '×' means '-', '÷' means '×', then what will come in place of the question mark (?) in the following equation?

$$320 + 64 - 18 \div 2 \times 28 = ?$$

Ans ☐ 1. 22

☐ 2. 29

☐ 3. 18

☒ 4. 13

Question ID : 264330101103

Option 1 ID : 264330396959

Option 2 ID : 264330396960

Option 3 ID : 264330396958

Option 4 ID : 264330396957

Status : Answered

Chosen Option : 4

Q.8 Which figure should replace the question mark (?) in the following series to continue the pattern?

L	T	U	3	6	L	6	L	T	=	U	6	
	=			T			□			L		?
3	6	□	□	=	U	=	U	4	4	□	T	

Ans

✓ 1.

U	6	L
	4	
□	T	F

✗ 2.

T	□	4
	=	
L	U	=

✗ 3.

F	=	U
	6	
L	4	□

✗ 4.

T	6	U
	=	
□	4	L

Question ID : 264330129606

Option 1 ID : 264330507790

Option 2 ID : 264330507793

Option 3 ID : 264330507791

Option 4 ID : 264330507792

Status : Not Answered

Chosen Option : --

Q.9 Two statements are given followed by two conclusions numbered I and II. Assuming the statements to be true, even if they seem to be at variance with commonly known facts, decide which of the conclusions logically follow(s) from the statements.

Statements:

Some curtains are fans.

Some fans are bulbs.

Conclusions:

I. Some curtains are bulbs.

II. All bulbs are fans.

- Ans**
- ☒ 1. Only conclusion II follows
 - ☒ 2. Both conclusions I and II follow
 - ☒ 3. Only conclusion I follows
 - ☒ 4. Neither conclusion I nor II follows

Question ID : 264330144959

Option 1 ID : 264330568092

Option 2 ID : 264330568093


Option 3 ID : 264330568091

Option 4 ID : 264330568094

Status : Answered

Chosen Option : 4

Q.10 Select the figure from among the given options that can replace the question mark (?) in the following series.



Ans

☒ 1.



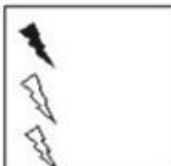
☒ 2.



☒ 3.



☒ 4.



Question ID : 26433087164

Option 1 ID : 264330342294

Option 2 ID : 264330342295

Option 3 ID : 264330342296

Option 4 ID : 264330342293

Status : Answered

Chosen Option : 2

Q.11 A, B, C, D, E, F and G are of different heights. A is shorter than only three people. D is taller than only F. B is taller than A but shorter than both C and E. E is not the tallest person. How many people are shorter than G?

- Ans ☒ 1. Two
☐ 2. Five
☐ 3. Four
☐ 4. Three

Question ID : 264330131657

Option 1 ID : 264330515730

Option 2 ID : 264330515729

Option 3 ID : 264330515727

Option 4 ID : 264330515728

Status : Answered

Chosen Option : 1

Q.12 Select the number from among the given options that can replace the question mark (?) in the following series.
23, 34, 45, 56, 67, ?

- Ans ☐ 1. 76
☐ 2. 79
☐ 3. 77
☒ 4. 78

Question ID : 264330112657

Option 1 ID : 264330442713

Option 2 ID : 264330442716

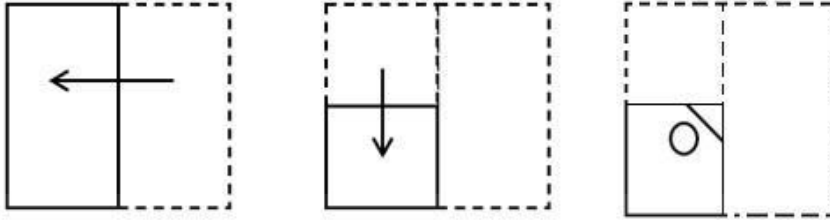
Option 3 ID : 264330442714

Option 4 ID : 264330442715

Status : Answered

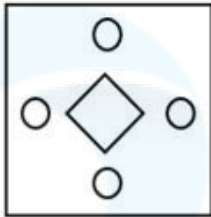
Chosen Option : 4

Q.13 A paper is folded and cut as shown below. How will it appear when unfolded?

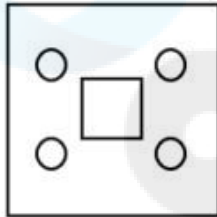


Ans

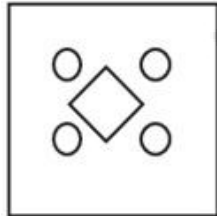
✗ 1.




✗ 2.



✓ 3.



✗ 4.



Question ID : 264330106342

Option 1 ID : 264330417672

Option 2 ID : 264330417670

Option 3 ID : 264330417671

Option 4 ID : 264330417669

Status : Answered

Chosen Option : 3

Q.14 Select the correct option that indicates the arrangement of the following words in a logical and meaningful order.

1. Furniture
2. Cupboard
3. Handle
4. Drawer
5. Wood

Ans ☒ 1. 4, 3, 1, 2, 5

☒ 2. 1, 3, 4, 2, 5

☒ 3. 3, 4, 2, 1, 5

☒ 4. 3, 4, 2, 5, 1

Question ID : 264330132912

Option 1 ID : 264330520707

Option 2 ID : 264330520710

Option 3 ID : 264330520709

Option 4 ID : 264330520708

Status : Not Attempted and
Marked For Review

Chosen Option : --

Q.15 In a code language, 'CREATE' is written as 'DTHEYK', 'CRITICAL' is written as 'DTLXNIHT', how will 'SKILL' be written in that language?

Ans ☒ 1. RMLPR

☒ 2. TMLPQ

☒ 3. TNOPQ

☒ 4. SMLQQ

Question ID : 26433079394

Option 1 ID : 264330311565

Option 2 ID : 264330311564

Option 3 ID : 264330311566

Option 4 ID : 264330311567

Status : Answered

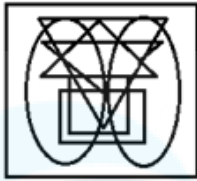
Chosen Option : 2

Q.16 Select the option figure in which the given figure is embedded (rotation is NOT allowed).

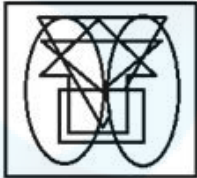


Ans

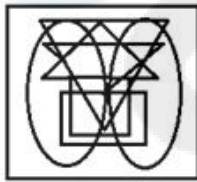
✗ 1.



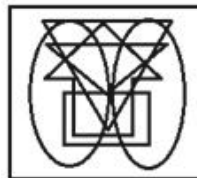
✗ 2.



✗ 3.



✓ 4.



Question ID : 264330129590

Option 1 ID : 264330507728

Option 2 ID : 264330507729

Option 3 ID : 264330507727

Option 4 ID : 264330507726

Status : Answered

Chosen Option : 4

Q.17 Which of the following interchange of numbers (not digits) would make the given equation correct?

$$30 \times 6 \div 15 + 7 + 40 = 50$$

Ans

✗ 1. 40, 50

✗ 2. 15, 40

✓ 3. 15, 30

✗ 4. 6, 30

Question ID : 264330144864

Option 1 ID : 264330567714

Option 2 ID : 264330567713

Option 3 ID : 264330567712

Option 4 ID : 264330567711

Status : Answered

Chosen Option : 3

Q.18 If 12th January 2015 was Monday, then what day of the week was it on 26th January 2016?

- Ans
- ☐ 1. Thursday
 - ☐ 2. Friday
 - ☒ 3. Tuesday
 - ☐ 4. Wednesday

Question ID : 264330144943
Option 1 ID : 264330568029
Option 2 ID : 264330568030
Option 3 ID : 264330568027
Option 4 ID : 264330568028
Status : Answered
Chosen Option : 4

Q.19 Select the option that is related to the sixth number in the same way as the first number is related to the second number and the third number is related to the fourth number.
1444 : 38 :: 1225 : 35 :: ? : 47

- Ans
- ☐ 1. 1369
 - ☒ 2. 2209
 - ☐ 3. 2162
 - ☐ 4. 1024

Question ID : 26433087210
Option 1 ID : 264330342477
Option 2 ID : 264330342479
Option 3 ID : 264330342480
Option 4 ID : 264330342478
Status : Answered
Chosen Option : 2

Q.20 Which two numbers (not digits) should be interchanged to make the given equation correct?

$$(\sqrt{144} \div 4)^3 + (6)^2 - (28 \times 2) + 72 + (32 \div 8) \times 3 = 52$$

- Ans
- ☐ 1. 3 and 6
 - ☐ 2. 2 and 8
 - ☐ 3. 2 and 4
 - ☒ 4. 4 and 6

Question ID : 264330144856
Option 1 ID : 264330567680
Option 2 ID : 264330567679
Option 3 ID : 264330567682
Option 4 ID : 264330567681
Status : Marked For Review
Chosen Option : 4

Q.21 Shruti departs from her home and walks 47 m towards the west. She then turns right and walks 18 m. She turns left and walks 53 m. She takes a final left turn and walks 30 m. How far is she from a pole which is exactly 12 m to the south of her home? (Assume that all the turns are 90° turns only.)

Ans ☒ 1. 100 m

☒ 2. 105 m

☒ 3. 90 m

☒ 4. 110 m

Question ID : 264330131619

Option 1 ID : 264330515576

Option 2 ID : 264330515578

Option 3 ID : 264330515575

Option 4 ID : 264330515577

Status : Answered

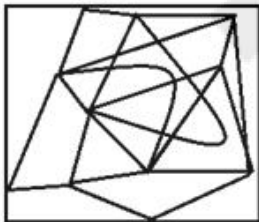
Chosen Option : 1

Q.22 Select the option figure in which the given figure is embedded (rotation is NOT allowed).

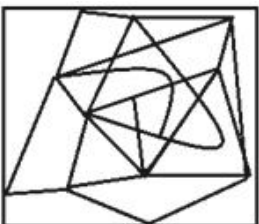


Ans

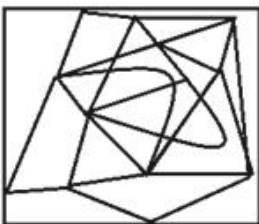
☒ 1.



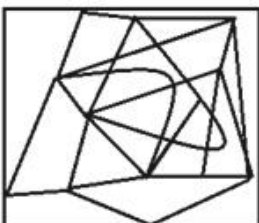
☒ 2.



☒ 3.



☒ 4.



Question ID : 264330129591

Option 1 ID : 264330507732

Option 2 ID : 264330507733

Option 3 ID : 264330507730

Option 4 ID : 264330507731

Status : Answered

Chosen Option : 1

Q.23 Three of the following four letter-clusters are alike in a certain way and one is different.
Pick the odd one out.

- Ans ☒ 1. RUF
☒ 2. ADW
☒ 3. GTQ
☒ 4. KNM

Question ID : 26433058004

Option 1 ID : 264330227003

Option 2 ID : 264330227001

Option 3 ID : 264330227000

Option 4 ID : 264330227002

Status : Answered

Chosen Option : 3

Q.24 Select the correct combination of mathematical signs that can sequentially replace '%' and balance the following equation.
 $35 \% 4 \% 12 \% 3 \% 6 \% 5 \% 5$

- Ans ☒ 1. $-, +, \div, \times, =, +$
☒ 2. $-, +, \times, =, \div, +$
☒ 3. $+, -, \div, \times, =, +$
☒ 4. $-, +, \div, =, \times, +$

Question ID : 264330129587

Option 1 ID : 264330507717

Option 2 ID : 264330507714

Option 3 ID : 264330507716

Option 4 ID : 264330507715

Status : Answered

Chosen Option : 4

Q.25 Given below is a statement followed by two conclusions I and II. Study the statement carefully and decide which Conclusion/s is/are definitely true.

Statement: $M \geq N = O \geq P \leq W$; $X \leq O > Y$

Conclusion I: $M > Y$

Conclusion II: $X \leq W$

- Ans ☒ 1. Neither Conclusion I nor II is true.
☒ 2. Both Conclusions I and II are true.
☒ 3. Only Conclusion I is true.
☒ 4. Only Conclusion II is true.

Question ID : 264330131076

Option 1 ID : 264330513418

Option 2 ID : 264330513417

Option 3 ID : 264330513415

Option 4 ID : 264330513416

Status : Answered

Chosen Option : 3

Q.26 Seven people, A, B, C, D, E, F and G, are sitting in a straight row, facing north. Only 2 people sit to the left of E. G is an immediate neighbour of E. B sits to the immediate right of F. Only 3 people sit between G and F. A sits to the immediate left of D.

Who sits to the immediate right of E?

- Ans
- ☒ 1. F
 - ☒ 2. D
 - ☒ 3. G
 - ☒ 4. A

Question ID : 264330144960

Option 1 ID : 264330568098

Option 2 ID : 264330568097

Option 3 ID : 264330568095

Option 4 ID : 264330568096

Status : Answered

Chosen Option : 4

Q.27 Select the option that is related to the third word in the same way as the second word is related to the first word. (The words must be considered as meaningful English words and must NOT be related to each other based on the number of letters/number of consonants/vowels in the word)
Snake: Hiss:: Leaves:?

- Ans
- ☒ 1. Cackle
 - ☒ 2. Rustle
 - ☒ 3. Chirp
 - ☒ 4. Hum

Question ID : 26433069173

Option 1 ID : 264330271205

Option 2 ID : 264330271206

Option 3 ID : 264330271204

Option 4 ID : 264330271207

Status : Not Answered

Chosen Option : --

Q.28 Select the option that represents the correct order of the given words as they would appear in an English dictionary.

1. Melodrama
2. Melodious
3. Melancholy
4. Melting
5. Melanin
6. Mellowed

- Ans
- ☒ 1. 3, 5, 6, 2, 1, 4
 - ☒ 2. 4, 3, 5, 6, 2, 1
 - ☒ 3. 3, 5, 6, 1, 2, 4
 - ☒ 4. 3, 5, 1, 2, 6, 4

Question ID : 264330144928

Option 1 ID : 264330567970

Option 2 ID : 264330567968

Option 3 ID : 264330567969

Option 4 ID : 264330567967

Status : Answered

Chosen Option : 1

Q.29 Which of the following numbers will replace the question mark (?) in the given series?
414, 410, 402, 390, 374, ?

- Ans ☒ 1. 354
☒ 2. 366
☒ 3. 309
☒ 4. 367

Question ID : 264330102158
Option 1 ID : 264330401099
Option 2 ID : 264330401100
Option 3 ID : 264330401098
Option 4 ID : 264330401097
Status : Answered
Chosen Option : 1

Q.30 Mehar drives 19 km East from his home. He then takes a left turn and drives 11 km. He again takes a left turn and drives 19 km. How far is he from starting point in a straight line?

- Ans ☒ 1. 30 km
☒ 2. 11 km
☒ 3. 19 km
☒ 4. 21 km

Question ID : 264330132110
Option 1 ID : 264330517536
Option 2 ID : 264330517538
Option 3 ID : 264330517537
Option 4 ID : 264330517535
Status : Answered
Chosen Option : 2

Q.31 Which of the following terms will replace the question mark (?) in the given series?
BDH, CEI, DFJ, EGK, FHL, ?

- Ans ☒ 1. GIM
☒ 2. GHM
☒ 3. GHJ
☒ 4. GKM

Question ID : 26433090155
Option 1 ID : 264330354099
Option 2 ID : 264330354098
Option 3 ID : 264330354097
Option 4 ID : 264330354100
Status : Answered
Chosen Option : 1

Q.32 Two statements are given, followed by two conclusions numbered I and II. Assuming the statements to be true, even if they seem to be at variance with commonly known facts, decide which of the conclusions logically follow(s) from the statements.

Statements:

Some pianos are guitars.

All guitars are flutes.

Conclusion:

I)Some pianos are flute.

II)No guitar is a piano.

Ans ☒ 1. Only Conclusion II follows.

☒ 2. Only Conclusion I follows

☒ 3. Neither Conclusion I nor II follows.

☒ 4. Both Conclusions I and II follow.

Question ID : 26433067709

Option 1 ID : 264330265349

Option 2 ID : 264330265348

Option 3 ID : 264330265351

Option 4 ID : 264330265350

Status : Answered

Chosen Option : 2

Q.33 Which letter-cluster will replace the question mark (?) to complete the given series?

DTXO, FSVN, JRRM, ?, XPDK

Ans ☒ 1. QPKL

☒ 2. POLK

☒ 3. PQLL

☒ 4. QLPK

Question ID : 264330144906

Option 1 ID : 264330567881

Option 2 ID : 264330567880

Option 3 ID : 264330567882

Option 4 ID : 264330567879

Status : Answered

Chosen Option : 3

Q.34 Select the number from among the given options that can replace the question mark (?) in the following series.

11, 12, 14, 17, ?

Ans ☒ 1. 23

☒ 2. 22

☒ 3. 21

☒ 4. 20

Question ID : 264330112661

Option 1 ID : 264330442732

Option 2 ID : 264330442731

Option 3 ID : 264330442730

Option 4 ID : 264330442729

Status : Answered

Chosen Option : 3

Q.35 Three Statements are given followed by Three conclusions numbered I, II and III. Assuming the statements to be true, even if they seem to be at variance with commonly known facts, decide which of the conclusions logically follow(s) from the statements.

Statements:

All watches are cameras.

No camera is a pen.

Some watches are balls.

Conclusions:

I. Some balls are cameras.

II. No ball is a pen.

III. No pen is a watch.

- Ans**
- ☒ 1. Both conclusions I and II follow.
 - ☒ 2. Only conclusion II follows.
 - ☒ 3. Only conclusion I follows.
 - ☒ 4. Both conclusions I and III follow.

Question ID : 264330144912

Option 1 ID : 264330567903

Option 2 ID : 264330567905

Option 3 ID : 264330567906

Option 4 ID : 264330567904

Status : Answered

Chosen Option : 4

Q.36 Which of the following numbers will replace the question mark (?) in the given series?
48, 200, 540, ?, 2240

- Ans**
- ☒ 1. 1156
 - ☒ 2. 1176
 - ☒ 3. 1248
 - ☒ 4. 1348

Question ID : 26433082430

Option 1 ID : 264330323555

Option 2 ID : 264330323553

Option 3 ID : 264330323556

Option 4 ID : 264330323554

Status : Not Answered

Chosen Option : --

Q.37 Select the set in which the numbers are related in the same way as are the numbers of the following sets.

(NOTE : Operations should be performed on the whole numbers, without breaking down the numbers into its constituent digits. E.g. 13 – Operations on 13 such as adding/subtracting/multiplying etc. to 13 can be performed. Breaking down 13 into 1 and 3 and then performing mathematical operations on 1 and 3 is not allowed)
(2, 35, 5)
(6, 50, 4)

Ans ☒ 1. (4, 45, 5)

☒ 2. (9, 60, 4)

☒ 3. (3, 35, 5)

☒ 4. (3, 100, 7)

Question ID : 26433087038

Option 1 ID : 264330341794

Option 2 ID : 264330341796

Option 3 ID : 264330341795

Option 4 ID : 264330341793

Status : Answered

Chosen Option : 1

Q.38 Six students are sitting around a circular table facing the centre. Amit is sitting second to the left of Jia. Jia is an immediate neighbour of both Varun and Pramod. Sia is sitting second to the left of Amit. Amit is an immediate neighbour of both Mahesh and Varun. Who is the immediate neighbour of Sia and Jia?

Ans ☒ 1. Amit

☒ 2. Varun

☒ 3. Pramod

☒ 4. Mahesh

Question ID : 26433055680

Option 1 ID : 264330217706

Option 2 ID : 264330217705

Option 3 ID : 264330217704

Option 4 ID : 264330217707

Status : Answered

Chosen Option : 3

Q.39 Select the option that is related to the third word in the same way as the second word is related to the first word.

(The words must be considered as meaningful English words and must not be related to each other based on the number of letters/number of consonants/vowels in the word.)

Cricket : Bat :: Tennis : ?

Ans ☒ 1. Pole

☒ 2. Javelin

☒ 3. Racquet

☒ 4. Net

Question ID : 26433087286

Option 1 ID : 264330342784

Option 2 ID : 264330342783

Option 3 ID : 264330342782

Option 4 ID : 264330342781

Status : Answered

Chosen Option : 3

Q.40 Select the number from among the given options that can replace the question mark (?) in the following series.
43, 47, 55, 67, ?

- Ans
- ☒ 1. 85
 - ☒ 2. 87
 - ☒ 3. 83
 - ☒ 4. 81

Question ID : 264330112672
Option 1 ID : 264330442775
Option 2 ID : 264330442776
Option 3 ID : 264330442774
Option 4 ID : 264330442773
Status : Answered
Chosen Option : 3

Q.41 Select the option in which the given figure is embedded (rotation is NOT allowed).



Ans

- ☒ 1.
- ☒ 2.
- ☒ 3.
- ☒ 4.

Question ID : 264330111659
Option 1 ID : 264330438724
Option 2 ID : 264330438723
Option 3 ID : 264330438722
Option 4 ID : 264330438721
Status : Answered
Chosen Option : 3

Q.42 If 'A' stands for '+', 'B' stands for '×', 'C' stands for '+' and 'D' stands for '−', what will come in place of the question mark (?) in the following equation?
16 B 5 D 16 A 8 C 10 = ?

- Ans
- ☒ 1. 78
 - ☒ 2. 58
 - ☒ 3. 68
 - ☒ 4. 88

Question ID : 264330141902
Option 1 ID : 264330555929
Option 2 ID : 264330555927
Option 3 ID : 264330555928
Option 4 ID : 264330555930
Status : Answered
Chosen Option : 4

Q.43 If 'A' stands for '+', 'B' stands for '×', 'C' stands for '+' and 'D' stands for '−', what will come in place of the question mark (?) in the following equation?
62 B 2 D 45 A 5 C 7 = ?

- Ans
- ☒ 1. 123
 - ☒ 2. 122
 - ☒ 3. 121
 - ☒ 4. 120

Question ID : 264330141903
Option 1 ID : 264330555934
Option 2 ID : 264330555933
Option 3 ID : 264330555932
Option 4 ID : 264330555931
Status : Answered
Chosen Option : 2

Q.44 M is the daughter of R. Z is the husband of M. X is the son of R. Z is the son-in-law of Y.
How is X related to Y?

- Ans
- ☒ 1. Daughter's husband
 - ☒ 2. Son
 - ☒ 3. Father's Brother
 - ☒ 4. Brother

Question ID : 26433099144
Option 1 ID : 264330389189
Option 2 ID : 264330389191
Option 3 ID : 264330389192
Option 4 ID : 264330389190
Status : Answered
Chosen Option : 2

Q.45 Three of the following four letter-clusters are alike in a certain way and one is different.
Pick the odd one out.

- Ans ☒ 1. NMP
☒ 2. KPR
☒ 3. BYA
☒ 4. FUW

Question ID : 26433057222
Option 1 ID : 264330223874
Option 2 ID : 264330223875
Option 3 ID : 264330223872
Option 4 ID : 264330223873
Status : Answered
Chosen Option : 1

Q.46 Three statements are given followed by three conclusions numbered I, II and III.
Assuming the statements to be true, even if they seem to be at variance with commonly known facts, decide which of the conclusions logically follow(s) from the statements.

Statements:

All Barbies are Snow-whites.

Some Barbies are Ariels.

Some Ariels are Doraemons.

Conclusions:

I. Some Doraemons are Snow-whites.

II. Some Barbies are Doraemons.

III. Some Ariels are Snow-whites.

- Ans ☒ 1. Only conclusion III follows
☒ 2. Only conclusions I and III follow
☒ 3. Only conclusions II and III follow
☒ 4. All the conclusions follow

Question ID : 26433085341
Option 1 ID : 264330335065
Option 2 ID : 264330335066
Option 3 ID : 264330335067
Option 4 ID : 264330335068
Status : Answered
Chosen Option : 1

Q.47 Select the set in which the numbers are related in the same way as are the numbers of the given sets.

(NOTE : Operations should be performed on the whole numbers, without breaking down the numbers into its constituent digits. E.g. 13 – Operations on 13 such as adding /deleting /multiplying etc. to 13 can be performed. Breaking down 13 into 1 and 3 and then performing mathematical operations on 1 and 3 is NOT allowed)

(100, 30, 10)

(250, 60, 70)

- Ans ☒ 1. (700, 220, 40)
☒ 2. (240, 187, 104)
☒ 3. (209, 122, 109)
☒ 4. (310, 198, 30)

Question ID : 26433083126
Option 1 ID : 264330326339
Option 2 ID : 264330326338
Option 3 ID : 264330326337
Option 4 ID : 264330326340
Status : Answered
Chosen Option : 1

Q.48 Which letter-cluster will replace the question mark (?) to complete the given series?
TWGC, PUFZ, ?, HQDT, DOCQ

- Ans ☒ 1. LSDW
☒ 2. LSDV
☒ 3. LSEW
☒ 4. LSEV

Question ID : 26433067961
Option 1 ID : 264330266357
Option 2 ID : 264330266359
Option 3 ID : 264330266356
Option 4 ID : 264330266358
Status : Answered
Chosen Option : 3

Q.49 'P + Q' means 'P is the wife of Q'
'P - Q' means 'P is the daughter of Q'
'P × Q' means 'P is the father of Q'
'P ÷ Q' means 'P is the brother of Q'
If 'V + M ÷ R - K', how is R related to V?

- Ans ☒ 1. Husband's sister
☒ 2. Sister
☒ 3. Brother
☒ 4. Husband's mother

Question ID : 264330102471
Option 1 ID : 264330402314
Option 2 ID : 264330402315
Option 3 ID : 264330402313
Option 4 ID : 264330402316
Status : Answered
Chosen Option : 1

Q.50 Select the option that is related to the sixth number in the same way as the first number is related to the second number and the third number is related to the fourth number.

133 : 7 :: 247 : 13 :: ? : 19

- Ans ☒ 1. 242
☒ 2. 361
☒ 3. 266
☒ 4. 399

Question ID : 26433087209
Option 1 ID : 264330342474
Option 2 ID : 264330342475
Option 3 ID : 264330342473
Option 4 ID : 264330342476
Status : Answered
Chosen Option : 2

Q.1 The 'Urban Self Employment Programme' and the 'Urban Wage Employment Programme' are the two special components of which poverty alleviation programme of India?

- Ans**
- ☒ 1. Antyodaya Anna Yojana
 - ☒ 2. Rural Employment Generation Programme
 - ☒ 3. Pradhan Mantri Gramodaya Yojana
 - ☒ 4. Swarna Jayanti Shahari Rozgar Yojana

Question ID : 264330130599

Option 1 ID : 264330511507

Option 2 ID : 264330511509

Option 3 ID : 264330511508

Option 4 ID : 264330511510

Status : Not Answered

Chosen Option : --

Q.2 In Himalayas, the _____ temperature with increasing altitude causes the change in vegetation.

- Ans**
- ☒ 1. fluctuating
 - ☒ 2. increasing
 - ☒ 3. stable
 - ☒ 4. decreasing

Question ID : 264330170002

Option 1 ID : 264330666686

Option 2 ID : 264330666684

Option 3 ID : 264330666685

Option 4 ID : 264330666683

Status : Answered

Chosen Option : 4

Q.3 Sohrai, Karam and Jawa festivals are celebrated in which state of India?

- Ans**
- ☒ 1. Andhra Pradesh
 - ☒ 2. Rajasthan
 - ☒ 3. Haryana
 - ☒ 4. Jharkhand

Question ID : 264330111160

Option 1 ID : 264330436725

Option 2 ID : 264330436728

Option 3 ID : 264330436726

Option 4 ID : 264330436727

Status : Not Attempted and Marked For Review

Chosen Option : --

Q.4 Which synthetic aromatic organic compound inhibits the chemical breakdown of food that occurs in the presence of oxygen, commonly used in foods such as crackers, microwave popcorn, butter and chicken nuggets?

Ans ✓ 1. Tertiary butyl hydroquinone

✗ 2. Sodium hypochlorite

✗ 3. Diethyltoluamide

✗ 4. 1,4-dichlorobenzene

Question ID : 264330131009

Option 1 ID : 264330513149

Option 2 ID : 264330513150

Option 3 ID : 264330513148

Option 4 ID : 264330513147

Status : Not Answered

Chosen Option : --

Q.5 When do the drugs used as medicines become potential poisons?

Ans ✗ 1. When doses are taken lower than recommended

✓ 2. When doses are taken higher than recommended

✗ 3. When doses are taken at the recommended time and in the recommended quantity

✗ 4. When doses are taken as recommended

Question ID : 264330111560

Option 1 ID : 264330438325

Option 2 ID : 264330438326

Option 3 ID : 264330438328

Option 4 ID : 264330438327

Status : Answered

Chosen Option : 2

Q.6 'The Last Song of Dusk' is the debut novel of:

Ans ✗ 1. Ravinder Singh

✗ 2. Nikita Singh

✗ 3. Ira Trivedi

✓ 4. Siddharth Dhanvant Shanghvi

Question ID : 26433071714

Option 1 ID : 264330281283

Option 2 ID : 264330281280

Option 3 ID : 264330281282

Option 4 ID : 264330281281

Status : Answered

Chosen Option : 4

Q.7 Which article allows the state to make provisions for the upliftment of certain categories of people like socially and culturally backward classes and Scheduled caste and Scheduled Tribes?

- Ans
- ☐ 1. Article 16
 - ☐ 2. Article 17
 - ☒ 3. Article 15
 - ☐ 4. Article 14

Question ID : 264330112775

Option 1 ID : 264330443187

Option 2 ID : 264330443188

Option 3 ID : 264330443186

Option 4 ID : 264330443185

Status : Answered

Chosen Option : 1

Q.8 Who was the first defence minister of India?

- Ans
- ☐ 1. Kailash Nath Katju
 - ☐ 2. Swaran Singh
 - ☐ 3. YB Chavan
 - ☒ 4. Baldev Singh

Question ID : 264330133076

Option 1 ID : 264330521358

Option 2 ID : 264330521357

Option 3 ID : 264330521355

Option 4 ID : 264330521356

Status : Answered

Chosen Option : 4

Q.9 What is the national female workforce participation rate as per the Census of India 2011?

- Ans
- ☐ 1. 53.26%
 - ☐ 2. 30.02%
 - ☐ 3. 53.03%
 - ☒ 4. 25.51%

Question ID : 264330166820

Option 1 ID : 264330654315

Option 2 ID : 264330654316

Option 3 ID : 264330654317

Option 4 ID : 264330654318

Status : Not Answered

Chosen Option : --

Q.10 Which essential micronutrient plays a clear role in the synthesis, storage and secretion of insulin in the hexameric form as well as in the conformational integrity of insulin?

- Ans
- ☒ 1. Phosphorus
 - ☒ 2. Fluoride
 - ☒ 3. Zinc
 - ☒ 4. Selenium

Question ID : 264330113464

Option 1 ID : 264330445943

Option 2 ID : 264330445944

Option 3 ID : 264330445941

Option 4 ID : 264330445942

Status : Not Answered

Chosen Option : --

Q.11 International Yoga Day is celebrated on _____.

- Ans
- ☒ 1. 23 June
 - ☒ 2. 20 June
 - ☒ 3. 22 June
 - ☒ 4. 21 June

Question ID : 264330110353

Option 1 ID : 264330433692

Option 2 ID : 264330433689

Option 3 ID : 264330433691

Option 4 ID : 264330433690

Status : Answered

Chosen Option : 1

Q.12 Which of the following civilian awards was conferred upon Mulayam Singh Yadav (Posthumous) for the year 2023?

- Ans
- ☒ 1. Padma Shri
 - ☒ 2. Bharat Ratna
 - ☒ 3. Padma Vibhushan
 - ☒ 4. Padma Bhushan

Question ID : 264330133007

Option 1 ID : 264330521086

Option 2 ID : 264330521083

Option 3 ID : 264330521084

Option 4 ID : 264330521085

Status : Answered

Chosen Option : 3

Q.13 The Provincial elections were held for the first time in _____ under the Government of India Act, 1935.

Ans ☒ 1. 1937

☐ 2. 1936

☐ 3. 1938

☐ 4. 1935

Question ID : 264330111395

Option 1 ID : 264330437668

Option 2 ID : 264330437665

Option 3 ID : 264330437667

Option 4 ID : 264330437666

Status : Not Answered

Chosen Option : --

Q.14 Which of the following is related to a purificatory ceremony called shuddhi for those Hindus who had been converted to other religions like Islam and Christianity?

Ans ☐ 1. Veda Samaj

☐ 2. Ramakrishna Mission

☐ 3. Brahmo Samaj

☒ 4. Arya Samaj

Question ID : 264330165403

Option 1 ID : 264330648693

Option 2 ID : 264330648694

Option 3 ID : 264330648691

Option 4 ID : 264330648692

Status : Answered

Chosen Option : 3

Q.15 In November 2022, who became the 50th Chief Justice of India?

Ans ☐ 1. Justice Hemant Gupta

☐ 2. Justice S Abdul Nazeer

☒ 3. Justice DY Chandrachud

☐ 4. Justice Indira Banerjee

Question ID : 264330158509

Option 1 ID : 264330621398

Option 2 ID : 264330621395

Option 3 ID : 264330621397

Option 4 ID : 264330621396

Status : Answered

Chosen Option : 3

Q.16 What was the symbol Henry Moseley used for denoting atomic number?

Ans ☐ 1. U

☒ 2. Z

☐ 3. M

☐ 4. A

Question ID : 264330137303

Option 1 ID : 264330537841

Option 2 ID : 264330537839

Option 3 ID : 264330537842

Option 4 ID : 264330537840

Status : Not Answered

Chosen Option : --

Q.17 All the changes in climate and weather takes place in _____.

- Ans ☒ 1. Troposphere
☒ 2. Thermosphere
☒ 3. mesosphere
☒ 4. stratosphere

Question ID : 264330117620
Option 1 ID : 264330462507
Option 2 ID : 264330462508
Option 3 ID : 264330462505
Option 4 ID : 264330462506
Status : Answered
Chosen Option : 1

Q.18 Identify the odd term with respect to allotropes of carbon.

- Ans ☒ 1. Tungsten
☒ 2. Buckminsterfullerene
☒ 3. Graphite
☒ 4. Diamond

Question ID : 264330134858
Option 1 ID : 264330528367
Option 2 ID : 264330528368
Option 3 ID : 264330528369
Option 4 ID : 264330528370
Status : Answered
Chosen Option : 3

Q.19 Which of the following has NOT been a positive impact of the Green Revolution in India?

- Ans ☒ 1. Non-food grains excluded
☒ 2. Reduced import of food grains
☒ 3. Benefits to farmers
☒ 4. Industrial growth

Question ID : 26433064538
Option 1 ID : 264330252747
Option 2 ID : 264330252744
Option 3 ID : 264330252745
Option 4 ID : 264330252746
Status : Answered
Chosen Option : 2

Q.20 At which of the following places was the ship building industry started in 1941?

- Ans ☒ 1. Damodar
☒ 2. Eluru
☒ 3. Vishakhapatnam
☒ 4. Kurnool

Question ID : 264330163214
Option 1 ID : 264330640168
Option 2 ID : 264330640170
Option 3 ID : 264330640169
Option 4 ID : 264330640167
Status : Answered
Chosen Option : 3

Q.21 For how many days is the Tirupati Tirumala Brahmotsavam organised?

- Ans ☒ 1. 15
☒ 2. 9
☒ 3. 5
☒ 4. 12

Question ID : 26433074094
Option 1 ID : 264330290499
Option 2 ID : 264330290497
Option 3 ID : 264330290496
Option 4 ID : 264330290498
Status : Not Answered
Chosen Option : --

Q.22 Certain provisions of the Benami Transactions (Prohibition) Act were struck off by the Supreme Court. In which year was this law originally enacted?

- Ans ☒ 1. 1988
☒ 2. 1999
☒ 3. 1980
☒ 4. 1998

Question ID : 264330156982
Option 1 ID : 264330615304
Option 2 ID : 264330615305
Option 3 ID : 264330615306
Option 4 ID : 264330615303
Status : Not Answered
Chosen Option : --

Q.23 The rule that 'it can move only one square in any direction' applies to whom in a game of chess?

- Ans ☒ 1. The Rook
☒ 2. The Queen
☒ 3. The King
☒ 4. The Bishop

Question ID : 264330109856
Option 1 ID : 264330431703
Option 2 ID : 264330431702
Option 3 ID : 264330431701
Option 4 ID : 264330431704
Status : Answered
Chosen Option : 3

Q.24 Pandit Ravi Shankar is an exponent of which musical instrument?

- Ans ☒ 1. Sitar
☒ 2. Veena
☒ 3. Sarangi
☒ 4. Sarod

Question ID : 26433064242
Option 1 ID : 264330251563
Option 2 ID : 264330251560
Option 3 ID : 264330251562
Option 4 ID : 264330251561
Status : Answered
Chosen Option : 1

Q.25 Which of the following Vedas depicts the life of the early Vedic people of India and has a collection of 1028 hymns divided into 10 mandalas?

- Ans** ☒ 1. Rigveda
☒ 2. Yajurveda
☒ 3. Atharvaveda
☒ 4. Samaveda

Question ID : 264330165335

Option 1 ID : 264330648420

Option 2 ID : 264330648422

Option 3 ID : 264330648419

Option 4 ID : 264330648421

Status : Answered

Chosen Option : 1

Q.26 The first Asian Games was held in _____ at _____.

- Ans** ☒ 1. 1984, Nepal
☒ 2. 1983, Bangladesh
☒ 3. 1951, New Delhi
☒ 4. 1981, New Delhi

Question ID : 264330110363

Option 1 ID : 264330433729

Option 2 ID : 264330433732

Option 3 ID : 264330433731

Option 4 ID : 264330433730

Status : Answered

Chosen Option : 4

Q.27 Which of the following is correct match between column-A and column-B?

Column-A (Type of rock)

Column-B (Method of formation)

- | | |
|----------------------|---|
| i. Sedimentary-rock | a. Transformed its chemical qualities from other type of rocks |
| ii. Metamorphic rock | b. Derived from magma that was poured out or ejected at the Earth's surface |
| iii. Igneous rock | c. Formed from fragments of other rocks or the remains of plants or animals |

- Ans** ☒ 1. i-c, ii-a, iii-b
☒ 2. i-b, ii-a, iii-c
☒ 3. i-a, ii-c, iii-b
☒ 4. i-a, ii-b, iii-c

Question ID : 264330111919

Option 1 ID : 264330439763

Option 2 ID : 264330439762

Option 3 ID : 264330439764

Option 4 ID : 264330439761

Status : Answered

Chosen Option : 2

Q.28 Which is a reversible, fluorescent red, acidic dye used to stain cytoplasm, red blood cells, collagen and muscle fibres for histological examination?

- Ans
- ☐ 1. Safranin
 - ☐ 2. Crystal violet
 - ☐ 3. Alizarin
 - ☒ 4. Eosin

Question ID : 264330113470

Option 1 ID : 264330445967

Option 2 ID : 264330445965

Option 3 ID : 264330445968

Option 4 ID : 264330445966

Status : Not Answered

Chosen Option : --

Q.29 The Family Courts (Amendment) Bill, 2022, is with regards to which of the following states?

- Ans
- ☐ 1. Himachal Pradesh and Uttarakhand
 - ☐ 2. Tripura and Assam
 - ☒ 3. Nagaland and Himachal Pradesh
 - ☐ 4. Nagaland and Tripura

Question ID : 264330158486

Option 1 ID : 264330621306

Option 2 ID : 264330621304

Option 3 ID : 264330621305

Option 4 ID : 264330621303

Status : Not Answered

Chosen Option : --

Q.30 Which process of phase transition is the reverse of deposition?

- Ans
- ☐ 1. Solidification
 - ☒ 2. Sublimation
 - ☐ 3. Fusion
 - ☐ 4. Vaporisation

Question ID : 264330169304

Option 1 ID : 264330663997

Option 2 ID : 264330663998

Option 3 ID : 264330663995

Option 4 ID : 264330663996

Status : Not Answered

Chosen Option : --

Q.31 Who succeeded in securing trading concessions for the East India Company from Mughal Emperor Jahangir?

- Ans
- ☐ 1. John Mildenhall
 - ☒ 2. Thomas Roe
 - ☐ 3. Captain Best
 - ☐ 4. Captain Hawkins

Question ID : 264330112187

Option 1 ID : 264330440835

Option 2 ID : 264330440836

Option 3 ID : 264330440834

Option 4 ID : 264330440833

Status : Answered

Chosen Option : 4

Q.32 To which of the following dynasties were the Vatapi Chalukyas tributary princes?

- Ans ☒ 1. Kalyani Chalukyas
☒ 2. Cholas
☒ 3. Kadambas
☒ 4. Pallavas

Question ID : 264330106603
Option 1 ID : 264330418716
Option 2 ID : 264330418714
Option 3 ID : 264330418713
Option 4 ID : 264330418715
Status : Not Answered
Chosen Option : --

Q.33 Which of the following statements is NOT true about the moist deciduous forests of India?

- Ans ☒ 1. They grow in regions with rainfall of 100-200 cm.
☒ 2. They are found in the foothills of Himalayas.
☒ 3. They are found in the plains of Bihar and Uttar Pradesh.
☒ 4. Sal, amla, shisham and mahua are some of the main species of these forests.

Question ID : 264330166805
Option 1 ID : 264330654255
Option 2 ID : 264330654258
Option 3 ID : 264330654256
Option 4 ID : 264330654257
Status : Not Answered
Chosen Option : --

Q.34 Which of the following pairs of locations are famous for Buddhist railings and gateways?

- Ans ☒ 1. Sarnath and Kushinagar
☒ 2. Parasnath and Ajanta
☒ 3. Bharhut and Amravati
☒ 4. Patna and Rajgir

Question ID : 264330141801
Option 1 ID : 264330555525
Option 2 ID : 264330555523
Option 3 ID : 264330555524
Option 4 ID : 264330555526
Status : Not Answered
Chosen Option : --

Q.35 Who among the following is the writer of 'Man's Search for Meaning'?

- Ans ☒ 1. Alfred Lansing
☒ 2. Edith Eger
☒ 3. Elie Wiesel
☒ 4. Viktor E Frankl

Question ID : 264330144840
Option 1 ID : 264330567617
Option 2 ID : 264330567618
Option 3 ID : 264330567616
Option 4 ID : 264330567615
Status : Not Answered
Chosen Option : --

Q.36 From which of the following cities does the National Remote Sensing Centre provide acquisition of data and its processing under satellite communication?

- Ans ☒ 1. New Delhi
☒ 2. Bengaluru
☒ 3. Hyderabad
☒ 4. Chennai

Question ID : 264330163222

Option 1 ID : 264330640200

Option 2 ID : 264330640201

Option 3 ID : 264330640202

Option 4 ID : 264330640199

Status : Answered

Chosen Option : 2

Q.37 Which of the following countries is related with high yielding variety seeds that are used as part of Green Revolution policies in India?

- Ans ☒ 1. Russia
☒ 2. The US
☒ 3. Mexico
☒ 4. China

Question ID : 264330111754

Option 1 ID : 264330439104

Option 2 ID : 264330439101

Option 3 ID : 264330439102

Option 4 ID : 264330439103

Status : Not Answered

Chosen Option : --

Q.38 Who was announced as the best male athlete in 36th National Games 2022?

- Ans ☒ 1. Praveen Chitravel
☒ 2. Amlan Borgohain
☒ 3. Ankur Goyal
☒ 4. Sajjan Prakash

Question ID : 264330120051

Option 1 ID : 264330470459

Option 2 ID : 264330470460

Option 3 ID : 264330470461

Option 4 ID : 264330470462

Status : Not Answered

Chosen Option : --

Q.39 'Paro Tsechu' is one of the most popular festivals in _____.

- Ans ☒ 1. China
☒ 2. Bhutan
☒ 3. Myanmar
☒ 4. Maldives

Question ID : 264330119833

Option 1 ID : 264330469608

Option 2 ID : 264330469609

Option 3 ID : 264330469610

Option 4 ID : 264330469607

Status : Answered

Chosen Option : 4

Q.40 Which of the following is a FALSE statement in the context of government budget?

- Ans** ☒ 1. There is no future obligation to return the amount in case of revenue receipts.
- ☒ 2. Fees and fines collected is an example of capital receipt.
- ☒ 3. Profit earned through Indian Railways is a part of non-tax revenue.
- ☒ 4. Recovery of a loan is a capital receipt.

Question ID : 264330109079

Option 1 ID : 264330428593

Option 2 ID : 264330428596

Option 3 ID : 264330428595

Option 4 ID : 264330428594

Status : Answered

Chosen Option : 1

Q.41 Madhuri Barthwal, the Padma Shri Awardee in 2022, is famous for her contribution to the field of:

- Ans** ☒ 1. Bundelkhandi folk music
- ☒ 2. Kashmiri folk music
- ☒ 3. Garhwali folk music
- ☒ 4. Punjabi folk music

Question ID : 26433064635

Option 1 ID : 264330253134

Option 2 ID : 264330253135

Option 3 ID : 264330253133

Option 4 ID : 264330253132

Status : Not Answered

Chosen Option : --

Q.42 From which state of India does Indira PP Bora, internationally acclaimed exponent of Bharatanatyam, Kuchipudi and Sattriya dances conferred with Padma Shri belong?

- Ans** ☒ 1. Assam
- ☒ 2. Tamil Nadu
- ☒ 3. West Bengal
- ☒ 4. Kerala

Question ID : 264330144843

Option 1 ID : 264330567627

Option 2 ID : 264330567628

Option 3 ID : 264330567630

Option 4 ID : 264330567629

Status : Not Answered

Chosen Option : --

Q.43 Guru Gangadhar Pradhan Award is given in which field of art?

- Ans** ☒ 1. Painting
- ☒ 2. Dance
- ☒ 3. Theatre
- ☒ 4. Textile Art

Question ID : 264330130532

Option 1 ID : 264330511240

Option 2 ID : 264330511239

Option 3 ID : 264330511241

Option 4 ID : 264330511242

Status : Not Answered

Chosen Option : --

Q.44 Samudragupta's achievements are recorded in a long inscription called Prashasti by his court poet, _____.

- Ans ☒ 1. Kalhan
☒ 2. Harisena
☒ 3. Rudrasena
☒ 4. Kalidasa

Question ID : 264330114811

Option 1 ID : 264330451330

Option 2 ID : 264330451331

Option 3 ID : 264330451329

Option 4 ID : 264330451332

Status : Answered

Chosen Option : 2

Q.45 _____ is an instrument under the Liquidity Adjustment Facility (LAF) at which RBI lends to commercial banks.

- Ans ☒ 1. Cash reserve ratio
☒ 2. Repo rate
☒ 3. Bank rate
☒ 4. Reverse repo rate

Question ID : 264330109976

Option 1 ID : 264330432184

Option 2 ID : 264330432182

Option 3 ID : 264330432181

Option 4 ID : 264330432183

Status : Answered

Chosen Option : 2

Q.46 Who was one of the 20th century's foremost exponents of the Bharatanatyam style of classical dance?

- Ans ☒ 1. Bijayini Satpathy
☒ 2. T Balasaraswati
☒ 3. Nirmala Mehta
☒ 4. Kumudini Lakhia

Question ID : 264330157015

Option 1 ID : 264330615437

Option 2 ID : 264330615436

Option 3 ID : 264330615438

Option 4 ID : 264330615435

Status : Not Answered

Chosen Option : --

Q.47 Which concept was proposed by Hutchinson in 1957 to express the relationship of an individual or population to all aspects of its environment?

- Ans
- ☒ 1. Ecological pyramid
 - ☒ 2. Ecological succession
 - ☒ 3. Ecological stratification
 - ☒ 4. Ecological niche

Question ID : 264330131003

Option 1 ID : 264330513126

Option 2 ID : 264330513124

Option 3 ID : 264330513125

Option 4 ID : 264330513123

Status : Answered

Chosen Option : 4

Q.48 What is the frequency of the Kalidas Samman?

- Ans
- ☒ 1. Once in three years
 - ☒ 2. Once in two years
 - ☒ 3. Once in a year
 - ☒ 4. Once in five years

Question ID : 264330157020

Option 1 ID : 264330615457

Option 2 ID : 264330615456

Option 3 ID : 264330615455

Option 4 ID : 264330615458

Status : Not Answered

Chosen Option : --

Q.49 Cristiano Ronaldo belongs to which country?

- Ans
- ☒ 1. Germany
 - ☒ 2. Portugal
 - ☒ 3. Argentina
 - ☒ 4. Brazil

Question ID : 264330110357

Option 1 ID : 264330433708

Option 2 ID : 264330433707

Option 3 ID : 264330433706

Option 4 ID : 264330433705

Status : Answered

Chosen Option : 2

Q.50 The Kailash temple is located inside _____.

- Ans
- ☒ 1. Elephanta Caves
 - ☒ 2. Ajanta Caves
 - ☒ 3. Khandgiri Caves
 - ☒ 4. Ellora Caves

Question ID : 26433066564

Option 1 ID : 264330260780

Option 2 ID : 264330260782

Option 3 ID : 264330260781

Option 4 ID : 264330260783

Status : Answered

Chosen Option : 1

Q.1 Select the option that expresses the given sentence in direct speech.
Manas said that Sooraj had arrived on Friday.

- Ans ☒ 1. Manas said, "Sooraj arrived on Friday."
☒ 2. Manas says, "Sooraj is arrived on Friday."
☒ 3. Manas say, "Sooraj arriving on Friday."
☒ 4. Manas says, "Sooraj has be arrives on Friday."

Question ID : 264330135986

Option 1 ID : 264330532788

Option 2 ID : 264330532789

Option 3 ID : 264330532787

Option 4 ID : 264330532790

Status : Answered

Chosen Option : 1

Q.2 Select the most appropriate option that can substitute the underlined segment in the given sentence.

The boy tried to complete the task on time because he didn't want to miss farther tasks.

- Ans ☒ 1. didn't want to miss further tasks
☒ 2. doesn't want to miss further tasks
☒ 3. doesn't want to miss farther tasks
☒ 4. didn't want of miss farther tasks

Question ID : 264330100993

Option 1 ID : 264330396520

Option 2 ID : 264330396518

Option 3 ID : 264330396517

Option 4 ID : 264330396519

Status : Answered

Chosen Option : 1

Q.3 Select the option that changes the form of narration in the following sentence.

The priest said to the convict, "Are you not ashamed of your misdeed?"

- Ans ☒ 1. The priest enquired the convict of whether she is not ashamed of her misdeed.
☒ 2. The priest enquired of the convict if was she not ashamed of her misdeed.
☒ 3. The priest enquired of the convict that she was not ashamed of her misdeed.
☒ 4. The priest enquired of the convict if she was not ashamed of her misdeed.

Question ID : 264330163268

Option 1 ID : 264330640385

Option 2 ID : 264330640386

Option 3 ID : 264330640384

Option 4 ID : 264330640383

Status : Answered

Chosen Option : 4

Q.4 Sentences of a paragraph are given below in jumbled order. Arrange the sentences in the correct order to form a meaningful and coherent paragraph.

A. Changes in the nature of light are brought on by the Raman Effect.

B. It examines how light behaves when it passes through a solid, liquid, or gaseous transparent media.

C. Similar to how a striker scatters coins on a carom board, the phenomenon occurs when light energy particles called photons are scattered by the medium's molecules.

D. Understanding the molecular structure of chemical molecules requires knowledge of the Raman Effect.

Ans ☒ 1. CABD

☒ 2. CBDA

☒ 3. BCDA

☒ 4. ABCD

Question ID : 264330117158

Option 1 ID : 264330460700

Option 2 ID : 264330460699

Option 3 ID : 264330460697

Option 4 ID : 264330460698

Status : Marked For Review

Chosen Option : 4

Q.5 Select the most appropriate option to fill in the blank.

The chemical spray is a very useful and distant weapon that may be used to attack from a long distance, _____ additional safety.

Ans ☒ 1. developing

☒ 2. ensuring

☒ 3. minimising

☒ 4. following

Question ID : 26433098917

Option 1 ID : 264330388322

Option 2 ID : 264330388321

Option 3 ID : 264330388324

Option 4 ID : 264330388323

Status : Answered

Chosen Option : 2

Q.6 Select the most appropriate option to substitute the underlined segment in the given sentence.

Vishnu was happy to push the boat out for his fiancée's birthday.

Ans ☒ 1. but seemed like pretending on

☒ 2. and felt so, that his heart started beating faster on

☒ 3. to spend a lot of money because he was celebrating

☒ 4. to take risks that could cause problems or danger on

Question ID : 264330164687

Option 1 ID : 264330645918

Option 2 ID : 264330645917

Option 3 ID : 264330645916

Option 4 ID : 264330645915

Status : Answered

Chosen Option : 3

Q.7 Select the most appropriate **ANTONYM** of the given word.
Duty

- Ans** ☒ 1. Option
☒ 2. Exemption
☒ 3. Loophole
☒ 4. Selection

Question ID : 264330170181
Option 1 ID : 264330667399
Option 2 ID : 264330667402
Option 3 ID : 264330667401
Option 4 ID : 264330667400
Status : Answered
Chosen Option : 1

Q.8 Select the option that expresses the given sentence in direct speech.
The travel agent asked whether I wanted to go by air or by sea.

- Ans** ☒ 1. The travel agent asked, "Did he want to go by air or sea?"
☒ 2. The travel agent asked, "Did you want to go by air or sea?"
☒ 3. The travel agent asked, "Do you want to go by air or sea?"
☒ 4. The travel agent asked, "How did you want to go by air or sea?"

Question ID : 264330137437
Option 1 ID : 264330538375
Option 2 ID : 264330538376
Option 3 ID : 264330538378
Option 4 ID : 264330538377
Status : Answered
Chosen Option : 3

Q.9 Select the most appropriate meaning for the given idiom.
Fall into line

- Ans** ☒ 1. Fuming and shouting
☒ 2. Adhere to rules
☒ 3. Searching something
☒ 4. Straight road to walk

Question ID : 264330168304
Option 1 ID : 264330660081
Option 2 ID : 264330660080
Option 3 ID : 264330660079
Option 4 ID : 264330660082
Status : Not Answered
Chosen Option : --

Q.10 Select the most appropriate option that can substitute the underlined segment in the given sentence. If there is no need to substitute it, select 'No substitution required'.

Though I was not happy, I went to the reception because of the sake of my friend.

- Ans ☒ 1. I have gone to the reception because of the sake of my friend
☒ 2. I went to the reception for the sake of my friend
☒ 3. I will go to the reception for the sake of my friend
☒ 4. I went for the reception for the sake of my friend

Question ID : 26433091874
Option 1 ID : 264330360836
Option 2 ID : 264330360833
Option 3 ID : 264330360834
Option 4 ID : 264330360835
Status : Answered
Chosen Option : 2

Q.11 Select the most appropriate preposition to fill in the blank.
Are you afraid _____ the dark?

- Ans ☒ 1. of
☒ 2. at
☒ 3. on
☒ 4. to

Question ID : 264330164312
Option 1 ID : 264330644466
Option 2 ID : 264330644463
Option 3 ID : 264330644465
Option 4 ID : 264330644464
Status : Answered
Chosen Option : 1

Q.12 Select the option that can substitute the bracketed word segment correctly and complete the following sentence meaningfully.
They didn't see you coming here, (is it)?

- Ans ☒ 1. didn't you
☒ 2. didn't they
☒ 3. did you
☒ 4. did they

Question ID : 264330134147
Option 1 ID : 264330525614
Option 2 ID : 264330525612
Option 3 ID : 264330525613
Option 4 ID : 264330525611
Status : Answered
Chosen Option : 4

Q.13 Select the most appropriate option to fill in the blank.

The most evident reason for cases pending in the Indian judiciary is an _____ representation of judges.

Ans ☒ 1. insufficient

☐ 2. optimised

☐ 3. unlawful

☐ 4. adequate

Question ID : 26433098915

Option 1 ID : 264330388314

Option 2 ID : 264330388316

Option 3 ID : 264330388313

Option 4 ID : 264330388315

Status : Answered

Chosen Option : 1

Q.14 Select the most appropriate option to fill in the blank.

Except the editing, all the other relevant parts of the movie _____.

Ans ☐ 1. is excellent

☒ 2. are excellent

☐ 3. was excellent

☐ 4. are being excellent

Question ID : 264330117214

Option 1 ID : 264330460917

Option 2 ID : 264330460919

Option 3 ID : 264330460920

Option 4 ID : 264330460918

Status : Answered

Chosen Option : 2

Q.15 Select the most appropriate ANTONYM of the given word.

Grandeur

Ans ☐ 1. Greatness

☒ 2. Insignificance

☐ 3. Assignment

☐ 4. Permission

Question ID : 264330139384

Option 1 ID : 264330545990

Option 2 ID : 264330545987

Option 3 ID : 264330545989

Option 4 ID : 264330545988

Status : Answered

Chosen Option : 2

Q.16 Sentences of a paragraph are given below in jumbled order. Arrange the sentences in the correct order to form a meaningful and coherent paragraph.

- A. It marked the 5th World Council for the Welfare of the Blind in Sao Paulo.
- B. The first Braille stamp was published by Canada Post in 2008.
- C. Brazil, however, purchased the first raised-dot Braille stamp in the world in 1974.
- D. It featured a yellow Labrador retriever guide dog, a species that is frequently used to assist the blind.

Ans ☒ 1. BDCA

☒ 2. ABCD

☒ 3. DCAB

☒ 4. CBAD

Question ID : 26433098151

Option 1 ID : 264330385258

Option 2 ID : 264330385257

Option 3 ID : 264330385259

Option 4 ID : 264330385260

Status : Answered

Chosen Option : 1

Q.17 Select the most appropriate option that can substitute the underlined segment in the given sentence.

Some teachers often praise their pupils' efforts while some use ridicule and irony.

Ans ☒ 1. appreciation

☒ 2. abuse

☒ 3. vigilant

☒ 4. sarcasm

Question ID : 264330117323

Option 1 ID : 264330461352

Option 2 ID : 264330461351

Option 3 ID : 264330461349

Option 4 ID : 264330461350

Status : Answered

Chosen Option : 2

Q.18 Select the option that expresses the given sentence in passive voice.
Look at the clock.

Ans ☒ 1. Let the clock look at.

☒ 2. Let the clock be looked at.

☒ 3. Let looked at the clock.

☒ 4. Let the clock be look at.

Question ID : 264330132775

Option 1 ID : 264330520197

Option 2 ID : 264330520198

Option 3 ID : 264330520196

Option 4 ID : 264330520195

Status : Answered

Chosen Option : 2

Q.19 Select the most appropriate option that can substitute the underlined segment in the given sentence.

River rafting is an adventure sport in which a group of five people levitate through a river in an inflatable raft.

- Ans
- ☒ 1. alleviate through a river
 - ☒ 2. assemble through a river
 - ☒ 3. deviate through a river
 - ☒ 4. navigate through a river

Question ID : 26433096164

Option 1 ID : 264330377426

Option 2 ID : 264330377428

Option 3 ID : 264330377425

Option 4 ID : 264330377427

Status : Marked For Review

Chosen Option : 1

Q.20 Identify the ANTONYM of the following word in the given sentence.

Furious

The frantic leader was outraged at the failure of his subordinate who unexpectedly was unperturbed.

- Ans
- ☒ 1. outraged
 - ☒ 2. frantic
 - ☒ 3. failure
 - ☒ 4. unperturbed

Question ID : 264330135897

Option 1 ID : 264330532444

Option 2 ID : 264330532443

Option 3 ID : 264330532445

Option 4 ID : 264330532446

Status : Answered

Chosen Option : 2

Q.21 Select the most appropriate synonym of the underlined word to fill in the blank.

He has a melancholic temperament; he is often _____.

- Ans
- ☒ 1. curious
 - ☒ 2. glad
 - ☒ 3. enthusiastic
 - ☒ 4. gloomy

Question ID : 264330164195

Option 1 ID : 264330644027

Option 2 ID : 264330644028

Option 3 ID : 264330644029

Option 4 ID : 264330644030

Status : Answered

Chosen Option : 4

Q.22 Select the option that expresses the given sentence in passive voice.
The company produces high-quality products.

- Ans ☒ 1. High-quality products are being produced by the company.
☒ 2. High-quality products are produced by the company.
☒ 3. High-quality products were produced by the company.
☒ 4. High-quality products produced by the company.

Question ID : 264330168229

Option 1 ID : 264330659793

Option 2 ID : 264330659792

Option 3 ID : 264330659791

Option 4 ID : 264330659794

Status : Answered

Chosen Option : 1

Q.23 Select the most appropriate ANTONYM of the given word.
Mercurial

- Ans ☒ 1. Salacious
☒ 2. Tranquil
☒ 3. Flippant
☒ 4. Bereaved

Question ID : 264330168041

Option 1 ID : 264330659051

Option 2 ID : 264330659052

Option 3 ID : 264330659054

Option 4 ID : 264330659053

Status : Marked For Review

Chosen Option : 2

Q.24 Select the option that expresses the following sentence in direct speech.

The judge commanded them to call the first witness.

- Ans ☒ 1. The first witness was commanded to come in.
☒ 2. The judge commanded the first witness to come in.
☒ 3. "Call the first witness," said the judge.
☒ 4. "Please call the first witness," the judge pleaded.

Question ID : 264330164201

Option 1 ID : 264330644054

Option 2 ID : 264330644053

Option 3 ID : 264330644052

Option 4 ID : 264330644051

Status : Answered

Chosen Option : 2

Q.25 Select the option that expresses the given sentence in direct speech.
The teacher reminded the students to submit their assignments by Friday.

- Ans ☒ 1. "Submit your assignments by Friday," reminded the teacher to the students.
☒ 2. "Submit your assignments by Friday," the students were instructed by the teacher.
☒ 3. "Submit your assignments by Friday," the teacher reminded the students.
☒ 4. "Submit your assignments by Friday," the students were reminded by the teacher.

Question ID : 264330137489
Option 1 ID : 264330538575
Option 2 ID : 264330538578
Option 3 ID : 264330538576
Option 4 ID : 264330538577
Status : Answered
Chosen Option : 3

Q.26 Select the most appropriate synonym of the underlined word in the following sentence.
The coach's instructions were concise, providing clear guidance to the team.

- Ans ☒ 1. Brief
☒ 2. Verbose
☒ 3. Lengthy
☒ 4. Many

Question ID : 264330164642
Option 1 ID : 264330645749
Option 2 ID : 264330645748
Option 3 ID : 264330645747
Option 4 ID : 264330645750
Status : Answered
Chosen Option : 1

Q.27 Select the option that expresses the given sentence in active voice.

Human life will be prolonged by a new drug called new-med.

- Ans ☒ 1. A new drug called new-med will prolong human life.
☒ 2. A new drug called new-med had prolonged human life.
☒ 3. A new drug called new-med is prolonging human life.
☒ 4. A new drug called new-med was prolonging human life.

Question ID : 26433089121
Option 1 ID : 264330350003
Option 2 ID : 264330350004
Option 3 ID : 264330350001
Option 4 ID : 264330350002
Status : Answered
Chosen Option : 1

Q.28 In the following questions a statement has been given with highlighted text. Select the options that can replace the text with correct idiom or phrase.
The trainee performed the task with extreme ease.

- Ans ☒ 1. At the eleventh hour
☒ 2. A piece of cake
☒ 3. Swan song
☒ 4. Call it a day

Question ID : 264330120756
Option 1 ID : 264330473240
Option 2 ID : 264330473239
Option 3 ID : 264330473241
Option 4 ID : 264330473242
Status : Answered
Chosen Option : 1

Q.29 Select the most appropriate option that can substitute the underlined segment in the given sentence.

When Shruti called Naufal, he was given the team a briefing of the project.

- Ans ☒ 1. was giving the team a briefing of
☒ 2. had been given the team a briefing of
☒ 3. was gave the team a briefing of
☒ 4. has been giving the team a briefing of

Question ID : 264330100999
Option 1 ID : 264330396544
Option 2 ID : 264330396543
Option 3 ID : 264330396541
Option 4 ID : 264330396542
Status : Answered
Chosen Option : 1

Q.30 Sentences of a paragraph are given below in jumbled order. Arrange the sentences in the correct logical order to form a meaningful and coherent paragraph.

A.A variety of diseases can be linked to unsanitary conditions and careless garbage disposal.

B.People understand the value of cleanliness but they often forget that they are also responsible for the cleanliness of the environment, that they are accountable for whatever waste they make and that simply getting rid of it from their homes will not help.

C.A clean and green environment is a fundamental tenet of sustainable development.

D.It could be due to a lack of information, pure laziness, or recklessness. Sometimes all it takes is a gentle nudge.

- Ans ☒ 1. BDCA
☒ 2. CABD
☒ 3. CBDA
☒ 4. ACDB

Question ID : 264330117484
Option 1 ID : 264330461962
Option 2 ID : 264330461964
Option 3 ID : 264330461961
Option 4 ID : 264330461963
Status : Answered
Chosen Option : 3

Q.31 Select the option that expresses the given sentence in active voice.
Your homework must be completed before the deadline.

- Ans
- ☒ 1. You must have completed your homework before the deadline.
 - ☒ 2. Your homework should be completed before the deadline.
 - ☒ 3. You must complete your homework before the deadline.
 - ☒ 4. Your homework must have been completed before the deadline.

Question ID : 264330164245

Option 1 ID : 264330644214

Option 2 ID : 264330644213

Option 3 ID : 264330644212

Option 4 ID : 264330644211

Status : Answered

Chosen Option : 3

Q.32 Select the most appropriate option that can substitute the underlined segment in the given sentence.

She is too good and real.

- Ans
- ☒ 1. more good and real
 - ☒ 2. very good but real
 - ☒ 3. too good to be real
 - ☒ 4. too good but real

Question ID : 264330117269

Option 1 ID : 264330461133

Option 2 ID : 264330461136

Option 3 ID : 264330461134

Option 4 ID : 264330461135

Status : Answered

Chosen Option : 3

Q.33 Select the most appropriate option to fill in the blank.

No parents _____ to see their children ruin their future.

- Ans
- ☒ 1. wish
 - ☒ 2. predict
 - ☒ 3. visualise
 - ☒ 4. think

Question ID : 26433098895

Option 1 ID : 264330388235

Option 2 ID : 264330388236

Option 3 ID : 264330388233

Option 4 ID : 264330388234

Status : Answered

Chosen Option : 1

Q.34 The following sentence has been split into four segments. Identify the segment that contains a grammatical error.

The judge decided that / the defendant was guilty of all charges, / and that a punishment of five years / in prison were appropriate.

- Ans ☒ 1. and that a punishment of five years
☒ 2. The judge decided that
☒ 3. in prison were appropriate
☒ 4. the defendant was guilty of all charges,

Question ID : 264330137470
Option 1 ID : 264330538501
Option 2 ID : 264330538499
Option 3 ID : 264330538502
Option 4 ID : 264330538500
Status : Answered
Chosen Option : 3

Q.35 Sentences of a paragraph are given below in jumbled order. Arrange the sentences in the correct order to form a meaningful and coherent paragraph.

A.Targeted advertising is playing an increasingly important role in social media marketing.

B.It wasn't until a few years ago that people began to perceive social media as a marketing tool.

C.Social media has long been regarded as a means of communicating with people via instant messaging and blogging.

D.In marketing, social media is a quick and easy means to share a company's information, such as advertising and products or services available to customers.

- Ans ☒ 1. DBCA
☒ 2. CBDA
☒ 3. DCBA
☒ 4. ACDB

Question ID : 26433097528
Option 1 ID : 264330382788
Option 2 ID : 264330382787
Option 3 ID : 264330382785
Option 4 ID : 264330382786
Status : Answered
Chosen Option : 4

Q.36 Select the option that expresses the following sentence in passive voice.
Agnes composed a song for her father's birthday.

- Ans ☒ 1. A song would have been composed by Agnes for her father's birthday.
☒ 2. A song had been composed by Agnes for her father's birthday.
☒ 3. A song was being composed by Agnes for her father's birthday.
☒ 4. A song was composed by Agnes for her father's birthday.

Question ID : 264330164386
Option 1 ID : 264330644758
Option 2 ID : 264330644755
Option 3 ID : 264330644757
Option 4 ID : 264330644756
Status : Answered
Chosen Option : 4

Q.37 Select the most appropriate meaning of the underlined idiom in the following sentence.

After having worked on the study non-stop for twenty-three years, Harvey finally called it a day last week.

- Ans
- ☒ 1. Started a new job
 - ☒ 2. Stopped working on something
 - ☒ 3. Decided to revise
 - ☒ 4. Honed a new skill

Question ID : 264330168045

Option 1 ID : 264330659068

Option 2 ID : 264330659069

Option 3 ID : 264330659067

Option 4 ID : 264330659070

Status : Answered

Chosen Option : 2

Q.38 Select the most appropriate meaning of the given idiom.
Up in arms

- Ans
- ☒ 1. Unable to do something
 - ☒ 2. Standing tall
 - ☒ 3. Ready to fight
 - ☒ 4. Doing exercise

Question ID : 264330135899

Option 1 ID : 264330532454

Option 2 ID : 264330532453

Option 3 ID : 264330532452

Option 4 ID : 264330532451

Status : Marked For Review

Chosen Option : 1

Q.39 Select the most appropriate option to fill in the blank.

Dust has _____ in the crevices of the house.

- Ans
- ☒ 1. flown
 - ☒ 2. assembled
 - ☒ 3. lived
 - ☒ 4. gathered

Question ID : 26433098897

Option 1 ID : 264330388241

Option 2 ID : 264330388243

Option 3 ID : 264330388244

Option 4 ID : 264330388242

Status : Answered

Chosen Option : 1

Q.40 The following sentence has been split into four segments. Identify the segment that contains a grammatical error.

Please tell me the truth, / is he here to have been investigating / the murder that / happened across the street?

Ans ☒ 1. is he here to have been investigating

☐ 2. the murder that

☐ 3. happened across the street

☐ 4. Please tell me the truth,

Question ID : 264330133410

Option 1 ID : 264330522672

Option 2 ID : 264330522673

Option 3 ID : 264330522674

Option 4 ID : 264330522671

Status : Answered

Chosen Option : 1

Q.41 Select the option that expresses the given sentence in passive voice.
You should eat fresh fruits.

Ans ☐ 1. Fresh fruits should be eat by you.

☐ 2. Fresh fruits should eat by you.

☒ 3. Fresh fruits should be eaten by you.

☐ 4. Fresh fruits should be ate by you.

Question ID : 264330132777

Option 1 ID : 264330520206

Option 2 ID : 264330520204

Option 3 ID : 264330520203

Option 4 ID : 264330520205

Status : Answered

Chosen Option : 3

Q.42 Parts of the following sentence have been given as options. One of them may contain an error. Select the part that contains the error from the given options. If you don't find any error, mark 'No error' as your answer.

I have never played a hero before, so I jump at the chance.

Ans ☐ 1. No error

☐ 2. I have never played

☒ 3. So I jump at the chance

☐ 4. a hero before

Question ID : 26433090488

Option 1 ID : 264330355404

Option 2 ID : 264330355401

Option 3 ID : 264330355403

Option 4 ID : 264330355402

Status : Answered

Chosen Option : 3

Q.43 Select the most appropriate option that can substitute the underlined segment in the given sentence.

He asked me what is my name?

- Ans
- ☒ 1. what was my name?
 - ☒ 2. what my name has been.
 - ☒ 3. what is my name.
 - ☒ 4. what my name was.

Question ID : 264330117259

Option 1 ID : 264330461095

Option 2 ID : 264330461096

Option 3 ID : 264330461094

Option 4 ID : 264330461093

Status : Answered

Chosen Option : 4

Q.44 The following sentence has been split into four segments. Identify the segment that contains a grammatical error.

I do not like / your paying / for the food / every time.

- Ans
- ☒ 1. every time
 - ☒ 2. for the food
 - ☒ 3. your paying
 - ☒ 4. I do not like

Question ID : 264330102135

Option 1 ID : 264330401008

Option 2 ID : 264330401007

Option 3 ID : 264330401006

Option 4 ID : 264330401005

Status : Answered

Chosen Option : 3

Q.45 The following sentence has been divided into segments. One of them may contain an error. Select the segment that contains the error from the given options. If you don't find any error, mark 'No error' as your answer.

Ignoring the red flag / warning in the beach / is no joke.

- Ans
- ☒ 1. Ignoring the red flag
 - ☒ 2. No Error
 - ☒ 3. warning in the beach
 - ☒ 4. is no joke.

Question ID : 26433096147

Option 1 ID : 264330377357

Option 2 ID : 264330377360

Option 3 ID : 264330377358

Option 4 ID : 264330377359

Status : Answered

Chosen Option : 4

Q.46 Select the option that expresses the given sentence in direct speech.

The teacher told the students that she had waited for them for about 15 minutes before leaving the class.

- Ans ☒ 1. The teacher said to the students, "I waited for you for about 15 minutes before leaving the class."
- ☐ 2. The teacher said to the students, "I could waited for you for about 15 minutes before leaving the class."
- ☐ 3. The teacher had said, "I had waited for you for about 15 minutes before leaving the class."
- ☐ 4. The teacher says, "I had waited for you for about 15 minutes before leaving the class."

Question ID : 26433099081

Option 1 ID : 264330388960

Option 2 ID : 264330388957

Option 3 ID : 264330388959

Option 4 ID : 264330388958

Status : Answered

Chosen Option : 1

Q.47 The following sentence has been split into four segments. Identify the segment that contains a grammatical error.

I love the dogs /; but I don't like / the dog my friend Tinzie / owns since it bites people.

- Ans ☒ 1. I love the dogs
- ☐ 2. owns since it bites people
- ☐ 3. ; but I don't like
- ☐ 4. the dog my friend Tinzie

Question ID : 264330137224

Option 1 ID : 264330537527

Option 2 ID : 264330537530

Option 3 ID : 264330537528

Option 4 ID : 264330537529

Status : Answered

Chosen Option : 2

Q.48 The following sentence has been split into four segments. Identify the segment that contains a grammatical error.

The school authorities are / decided to close the high school / wing for the next three days / due to power failure.

- Ans ☐ 1. due to power failure
- ☒ 2. The school authorities are
- ☐ 3. decided to close the high school
- ☐ 4. wing for the next three days

Question ID : 26433091955

Option 1 ID : 264330361160

Option 2 ID : 264330361157

Option 3 ID : 264330361158

Option 4 ID : 264330361159

Status : Answered

Chosen Option : 1

Q.49 Select the most appropriate idiom for the underlined word segment.
Low count of sales, despite the sincere efforts of the sales executive, has put her team in a very difficult situation to escape from.

- Ans ☒ 1. In a tight corner
☐ 2. Bury the hatchet
☐ 3. Cut to the chase
☐ 4. Right off the bat

Question ID : 264330167998
Option 1 ID : 264330658883
Option 2 ID : 264330658886
Option 3 ID : 264330658885
Option 4 ID : 264330658884
Status : Answered
Chosen Option : 1

Q.50 Select the option that expresses the given sentence in active voice.
A story has been written by Sarath.

- Ans ☐ 1. Sarath have written a story.
☐ 2. Sarath was written by a story.
☒ 3. Sarath has written a story.
☐ 4. Sarath wrote a story.

Question ID : 264330164354
Option 1 ID : 264330644628
Option 2 ID : 264330644627
Option 3 ID : 264330644629
Option 4 ID : 264330644630
Status : Answered
Chosen Option : 3

Q.51 Select the most appropriate ANTONYM of the given word.
Abundance

- Ans ☐ 1. Non-serious
☐ 2. Miser
☒ 3. Meagreness
☐ 4. Unpleasantness

Question ID : 264330137460
Option 1 ID : 264330538466
Option 2 ID : 264330538465
Option 3 ID : 264330538464
Option 4 ID : 264330538463
Status : Answered
Chosen Option : 3

Q.52 Select the most appropriate option that can substitute the underlined segment in the given sentence.

To take my parents on a pilgrimage by plane is one of the goal of my life after getting my first salary.

- Ans ☒ 1. one of the goals of my life
☐ 2. one of out of the goals of my life
☐ 3. one in the goal of my life
☐ 4. one of goal of my life

Question ID : 26433096160
Option 1 ID : 264330377411
Option 2 ID : 264330377410
Option 3 ID : 264330377412
Option 4 ID : 264330377409
Status : Answered
Chosen Option : 1

Q.53 Select the option that expresses the given sentence in indirect speech.
She said, "I will dance tomorrow."

- Ans ☐ 1. She said that she will dance tomorrow.
☒ 2. She said that she would dance the next day.
☐ 3. She said she would dance the next day.
☐ 4. She said that she would dance tomorrow.

Question ID : 264330168351
Option 1 ID : 264330660267
Option 2 ID : 264330660270
Option 3 ID : 264330660269
Option 4 ID : 264330660268
Status : Answered
Chosen Option : 2

Q.54 Select the option that expresses the given sentence in active voice.

I was given this book by my English teacher.

- Ans ☐ 1. This book was given to me by my English teacher.
☐ 2. My English teacher was given this book by me.
☐ 3. This book gave me my English teacher.
☒ 4. My English teacher gave me this book.

Question ID : 264330164592
Option 1 ID : 264330645551
Option 2 ID : 264330645553
Option 3 ID : 264330645554
Option 4 ID : 264330645552
Status : Answered
Chosen Option : 4

Q.55 Select the most appropriate **ANTONYM** of the given word.
Mitigate

- Ans**
- ☒ 1. Reform
 - ☒ 2. Mend
 - ☒ 3. Aggravate
 - ☒ 4. Sharpen

Question ID : 264330165264

Option 1 ID : 264330648148

Option 2 ID : 264330648147

Option 3 ID : 264330648149

Option 4 ID : 264330648150

Status : Answered

Chosen Option : 3

Q.56 Select the most appropriate option that can substitute the underlined segment in the given sentence.
The heart that is full of grievance is heavy.

- Ans**
- ☒ 1. filling with grief
 - ☒ 2. full of grieving
 - ☒ 3. full of grief
 - ☒ 4. filled with grieve

Question ID : 264330117048

Option 1 ID : 264330460276

Option 2 ID : 264330460274

Option 3 ID : 264330460275

Option 4 ID : 264330460273

Status : Answered

Chosen Option : 3

Q.57 Select the option that expresses the following sentence in direct speech.

He requested him to wait there till he returned.

- Ans**
- ☒ 1. He said to him, "Please wait here till I return."
 - ☒ 2. "Till he returns, please wait here," he requested.
 - ☒ 3. "Wait here till I return please!" he ordered.
 - ☒ 4. He asked him to wait here till here returns.

Question ID : 264330164202

Option 1 ID : 264330644058

Option 2 ID : 264330644057

Option 3 ID : 264330644055

Option 4 ID : 264330644056

Status : Answered

Chosen Option : 1

Q.58 Select the option that expresses the given sentence in passive voice.
Those kids always watch cartoon movies.

- Ans
- ☒ 1. Cartoon movies were watched by those kids always.
 - ☒ 2. Cartoon movies watched by those kids always.
 - ☒ 3. Cartoon movies are watched by those kids always.
 - ☒ 4. Cartoon movies are watching by those kids always.

Question ID : 264330164357

Option 1 ID : 264330644640

Option 2 ID : 264330644641

Option 3 ID : 264330644639

Option 4 ID : 264330644642

Status : Answered

Chosen Option : 3

Q.59 The following sentence has been divided into parts. One of them may contain an error.
Select the part that contains the error from the given options. If you don't find any error, mark 'No error' as your answer.
If you permit me, / I will bring and show / all my drawings to you.

- Ans
- ☒ 1. all my drawings to you
 - ☒ 2. I will bring and show
 - ☒ 3. If you permit me,
 - ☒ 4. No error

Question ID : 264330139154

Option 1 ID : 264330545193

Option 2 ID : 264330545192

Option 3 ID : 264330545191

Option 4 ID : 264330545194

Status : Answered

Chosen Option : 1

Q.60 Select the most appropriate option that can substitute the underlined segment in the given sentence.

I am very tired and need a chair to sit.

- Ans
- ☒ 1. need a chair to sit on
 - ☒ 2. need a chair to sit by
 - ☒ 3. need a chair to sit with
 - ☒ 4. need a chair to sit for

Question ID : 264330117268

Option 1 ID : 264330461129

Option 2 ID : 264330461130

Option 3 ID : 264330461132

Option 4 ID : 264330461131

Status : Answered

Chosen Option : 1

Q.61 Select the most appropriate option that can substitute the underlined segment in the given sentence.

Drop me a message when the food will be ready.

- Ans
- ☒ 1. the food will be prepared
 - ☒ 2. the food is ready
 - ☒ 3. the food shall be ready
 - ☒ 4. the food will ready

Question ID : 264330117264

Option 1 ID : 264330461116

Option 2 ID : 264330461115

Option 3 ID : 264330461114

Option 4 ID : 264330461113

Status : Answered

Chosen Option : 4

Q.62 Select the option that changes the form of narration in the following sentence.

Rohan said, "I didn't tell any lie to anyone."

- Ans
- ☒ 1. Rohan said that he did not tell any lie to anyone.
 - ☒ 2. Rohan said that I did not tell any lie to anyone.
 - ☒ 3. Rohan said that he had not told any lie to anyone.
 - ☒ 4. Rohan said that I had not told any lie to anyone.

Question ID : 264330163267

Option 1 ID : 264330640379

Option 2 ID : 264330640382

Option 3 ID : 264330640381

Option 4 ID : 264330640380

Status : Answered

Chosen Option : 3

Q.63 Select the most appropriate ANTONYM of the given word.
Carry

- Ans
- ☒ 1. Leave
 - ☒ 2. Take
 - ☒ 3. Transfer
 - ☒ 4. Haul

Question ID : 264330168296

Option 1 ID : 264330660050

Option 2 ID : 264330660049

Option 3 ID : 264330660048

Option 4 ID : 264330660047

Status : Not Answered

Chosen Option : --

Q.64 Select the most appropriate **ANTONYM** of the given word.
Advent

- Ans** ☒ 1. Departure
 ☒ 2. Arrival
 ☒ 3. Attraction
 ☒ 4. Experience

Question ID : **264330168280**
Option 1 ID : **264330659989**
Option 2 ID : **264330659987**
Option 3 ID : **264330659988**
Option 4 ID : **264330659990**
Status : **Not Answered**
Chosen Option : --

Q.65 Identify the **ANTONYM** of the following word in the given sentence.
Lethargy
The usually circumspect personnel's vigour for his duty was visible in his dealing with customers.

- Ans** ☒ 1. vigour
 ☒ 2. visible
 ☒ 3. usually
 ☒ 4. circumspect

Question ID : **264330135896**
Option 1 ID : **264330532441**
Option 2 ID : **264330532442**
Option 3 ID : **264330532439**
Option 4 ID : **264330532440**
Status : **Not Answered**
Chosen Option : --

Comprehension:

In the following passage, some words have been deleted. Read the passage carefully and select the most appropriate option to fill in each blank.

Cambridge University Press (1)_____ no responsibility for the persistence or accuracy of URLs for external or third-party internet websites referred to in (2)_____ publication, and (3)_____ guarantee that any content on such websites is, or will remain, accurate or appropriate. Information (4)_____ prices, travel timetables and other factual (5)_____ given in this work is correct at the time of first printing.

SubQuestion No : 66

Q.66 Select the most appropriate option to fill in blank no.1.

- Ans** ☒ 1. and
 ☒ 2. had
 ☒ 3. has
 ☒ 4. have

Question ID : **264330167897**
Option 1 ID : **264330658514**
Option 2 ID : **264330658513**
Option 3 ID : **264330658511**
Option 4 ID : **264330658512**
Status : **Marked For Review**
Chosen Option : **2**

Comprehension:

In the following passage, some words have been deleted. Read the passage carefully and select the most appropriate option to fill in each blank.

Cambridge University Press (1)_____ no responsibility for the persistence or accuracy of URLs for external or third-party internet websites referred to in (2)_____ publication, and (3)_____ guarantee that any content on such websites is, or will remain, accurate or appropriate. Information (4)_____ prices, travel timetables and other factual (5)_____ given in this work is correct at the time of first printing.

SubQuestion No : 67

Q.67 Select the most appropriate option to fill in blank no.2.

- Ans
- ☒ 1. there
 - ☒ 2. here
 - ☒ 3. this
 - ☒ 4. that

Question ID : 264330167898

Option 1 ID : 264330658517

Option 2 ID : 264330658518

Option 3 ID : 264330658516

Option 4 ID : 264330658515

Status : Answered

Chosen Option : 4

Comprehension:

In the following passage, some words have been deleted. Read the passage carefully and select the most appropriate option to fill in each blank.

Cambridge University Press (1)_____ no responsibility for the persistence or accuracy of URLs for external or third-party internet websites referred to in (2)_____ publication, and (3)_____ guarantee that any content on such websites is, or will remain, accurate or appropriate. Information (4)_____ prices, travel timetables and other factual (5)_____ given in this work is correct at the time of first printing.

SubQuestion No : 68

Q.68 Select the most appropriate option to fill in blank no.3.

- Ans
- ☒ 1. have not
 - ☒ 2. does not
 - ☒ 3. do not
 - ☒ 4. did not

Question ID : 264330167899

Option 1 ID : 264330658522

Option 2 ID : 264330658520

Option 3 ID : 264330658519

Option 4 ID : 264330658521

Status : Answered

Chosen Option : 4

Comprehension:

In the following passage, some words have been deleted. Read the passage carefully and select the most appropriate option to fill in each blank.

Cambridge University Press (1)_____ no responsibility for the persistence or accuracy of URLs for external or third-party internet websites referred to in (2)_____ publication, and (3)_____ guarantee that any content on such websites is, or will remain, accurate or appropriate. Information (4)_____ prices, travel timetables and other factual (5)_____ given in this work is correct at the time of first printing.

SubQuestion No : 69

Q.69 Select the most appropriate option to fill in blank no.4.

- Ans ☒ 1. regarding
☐ 2. concerned
☐ 3. related
☐ 4. obstructing

Question ID : 264330167900

Option 1 ID : 264330658526

Option 2 ID : 264330658524

Option 3 ID : 264330658523

Option 4 ID : 264330658525

Status : Answered

Chosen Option : 3

Comprehension:

In the following passage, some words have been deleted. Read the passage carefully and select the most appropriate option to fill in each blank.

Cambridge University Press (1)_____ no responsibility for the persistence or accuracy of URLs for external or third-party internet websites referred to in (2)_____ publication, and (3)_____ guarantee that any content on such websites is, or will remain, accurate or appropriate. Information (4)_____ prices, travel timetables and other factual (5)_____ given in this work is correct at the time of first printing.

SubQuestion No : 70

Q.70 Select the most appropriate option to fill in blank no.5.

- Ans ☐ 1. illustration
☐ 2. opinions
☒ 3. information
☐ 4. material

Question ID : 264330167901

Option 1 ID : 264330658530

Option 2 ID : 264330658528

Option 3 ID : 264330658529

Option 4 ID : 264330658527

Status : Answered

Chosen Option : 3

Comprehension:

In the following passage, some words have been deleted. Read the passage carefully and select the most appropriate option to fill in each blank.

(1)_____, there are numerous products available for customers to select from, whether they are using a physical store or (2)_____ online shopping platform. Almost every product or brand has (3)_____ own USP, packaging, colour combinations and more as marketing tactics, which it uses to market itself to the customers in a (4)_____ manner. Brands find it (5)_____ challenging to engage consumers as their attention spans are dwindling at an accelerated rate.

SubQuestion No : 71**Q.71 Select the most appropriate option to fill in blank number 1.**

- Ans ☒ 1. Today
 ☒ 2. Yesterday
 ☒ 3. In future
 ☒ 4. Long ago

Question ID : 264330167944

Option 1 ID : 264330658671

Option 2 ID : 264330658672

Option 3 ID : 264330658674

Option 4 ID : 264330658673

Status : Answered

Chosen Option : 1

Comprehension:

In the following passage, some words have been deleted. Read the passage carefully and select the most appropriate option to fill in each blank.

(1)_____, there are numerous products available for customers to select from, whether they are using a physical store or (2)_____ online shopping platform. Almost every product or brand has (3)_____ own USP, packaging, colour combinations and more as marketing tactics, which it uses to market itself to the customers in a (4)_____ manner. Brands find it (5)_____ challenging to engage consumers as their attention spans are dwindling at an accelerated rate.

SubQuestion No : 72**Q.72 Select the most appropriate option to fill in blank number 2.**

- Ans ☒ 1. an
 ☒ 2. the
 ☒ 3. in
 ☒ 4. a

Question ID : 264330167945

Option 1 ID : 264330658675

Option 2 ID : 264330658677

Option 3 ID : 264330658678

Option 4 ID : 264330658676

Status : Answered

Chosen Option : 1

Comprehension:

In the following passage, some words have been deleted. Read the passage carefully and select the most appropriate option to fill in each blank.

(1)_____, there are numerous products available for customers to select from, whether they are using a physical store or (2)_____ online shopping platform. Almost every product or brand has (3)_____ own USP, packaging, colour combinations and more as marketing tactics, which it uses to market itself to the customers in a (4)_____ manner. Brands find it (5)_____ challenging to engage consumers as their attention spans are dwindling at an accelerated rate.

SubQuestion No : 73

Q.73 Select the most appropriate option to fill in blank number 3.

- Ans ☒ 1. it's
☒ 2. its
☐ 3. there
☐ 4. their

Question ID : 264330167946

Option 1 ID : 264330658682

Option 2 ID : 264330658681

Option 3 ID : 264330658680

Option 4 ID : 264330658679

Status : Answered

Chosen Option : 2

Comprehension:

In the following passage, some words have been deleted. Read the passage carefully and select the most appropriate option to fill in each blank.

(1)_____, there are numerous products available for customers to select from, whether they are using a physical store or (2)_____ online shopping platform. Almost every product or brand has (3)_____ own USP, packaging, colour combinations and more as marketing tactics, which it uses to market itself to the customers in a (4)_____ manner. Brands find it (5)_____ challenging to engage consumers as their attention spans are dwindling at an accelerated rate.

SubQuestion No : 74

Q.74 Select the most appropriate option to fill in blank number 4.

- Ans ☐ 1. minute
☒ 2. unique
☐ 3. strangely
☐ 4. silent

Question ID : 264330167947

Option 1 ID : 264330658686

Option 2 ID : 264330658685

Option 3 ID : 264330658683

Option 4 ID : 264330658684

Status : Answered

Chosen Option : 4

Comprehension:

In the following passage, some words have been deleted. Read the passage carefully and select the most appropriate option to fill in each blank.

(1)_____, there are numerous products available for customers to select from, whether they are using a physical store or (2)_____ online shopping platform. Almost every product or brand has (3)_____ own USP, packaging, colour combinations and more as marketing tactics, which it uses to market itself to the customers in a (4)_____ manner. Brands find it (5)_____ challenging to engage consumers as their attention spans are dwindling at an accelerated rate.

SubQuestion No : 75**Q.75 Select the most appropriate option to fill in blank number 5.**

- Ans ☒ 1. increasingly
☐ 2. increasing
☐ 3. increase
☐ 4. increased

Question ID : 264330167948

Option 1 ID : 264330658690

Option 2 ID : 264330658689

Option 3 ID : 264330658687

Option 4 ID : 264330658688

Status : Answered

Chosen Option : 3

Comprehension:

In the following passage, some words have been deleted. Read the passage carefully and select the most appropriate option to fill in each blank.

Many years ago, when the art of stunting plants was quite unheard of 1._____ in remote areas of India, Buddhist monks in isolated monasteries in Tibet stunted trees like the oak, orange tree, peepal tree, etc, watching with 2._____ the tree still flowering and 3._____ fruit regardless of this 'deformity'. Since the trees looked so artistically 4._____, the art was learnt by some Chinese monks who taught 'Bonsai' making, an art that became most sought 5._____ in China.

SubQuestion No : 76**Q.76 Select the most appropriate option to fill in blank number 1.**

- Ans ☐ 1. expect
☐ 2. always
☐ 3. excerpt
☒ 4. except

Question ID : 264330168259

Option 1 ID : 264330659905

Option 2 ID : 264330659903

Option 3 ID : 264330659906

Option 4 ID : 264330659904

Status : Not Answered

Chosen Option : --

Comprehension:

In the following passage, some words have been deleted. Read the passage carefully and select the most appropriate option to fill in each blank.

Many years ago, when the art of stunting plants was quite unheard of 1. _____ in remote areas of India, Buddhist monks in isolated monasteries in Tibet stunted trees like the oak, orange tree, peepal tree, etc, watching with 2. _____ the tree still flowering and 3. _____ fruit regardless of this 'deformity'. Since the trees looked so artistically 4. _____, the art was learnt by some Chinese monks who taught 'Bonsai' making, an art that became most sought 5. _____ in China.

SubQuestion No : 77

Q.77 Select the most appropriate option to fill in blank number 2.

- Ans
- ☒ 1. embarrassment
 - ☒ 2. entertainment
 - ☒ 3. excitement
 - ☒ 4. encouragement

Question ID : 264330168260

Option 1 ID : 264330659910

Option 2 ID : 264330659908

Option 3 ID : 264330659907

Option 4 ID : 264330659909

Status : Answered

Chosen Option : 3

Comprehension:

In the following passage, some words have been deleted. Read the passage carefully and select the most appropriate option to fill in each blank.

Many years ago, when the art of stunting plants was quite unheard of 1. _____ in remote areas of India, Buddhist monks in isolated monasteries in Tibet stunted trees like the oak, orange tree, peepal tree, etc, watching with 2. _____ the tree still flowering and 3. _____ fruit regardless of this 'deformity'. Since the trees looked so artistically 4. _____, the art was learnt by some Chinese monks who taught 'Bonsai' making, an art that became most sought 5. _____ in China.

SubQuestion No : 78

Q.78 Select the most appropriate option to fill in blank number 3.

- Ans
- ☒ 1. ending
 - ☒ 2. bearing
 - ☒ 3. losing
 - ☒ 4. rising

Question ID : 264330168261

Option 1 ID : 264330659913

Option 2 ID : 264330659914

Option 3 ID : 264330659912

Option 4 ID : 264330659911

Status : Answered

Chosen Option : 2

Comprehension:

In the following passage, some words have been deleted. Read the passage carefully and select the most appropriate option to fill in each blank.

Many years ago, when the art of stunting plants was quite unheard of 1. _____ in remote areas of India, Buddhist monks in isolated monasteries in Tibet stunted trees like the oak, orange tree, peepal tree, etc, watching with 2. _____ the tree still flowering and 3. _____ fruit regardless of this 'deformity'. Since the trees looked so artistically 4. _____, the art was learnt by some Chinese monks who taught 'Bonsai' making, an art that became most sought 5. _____ in China.

SubQuestion No : 79

Q.79 Select the most appropriate option to fill in blank number 4.

- Ans
- ☒ 1. cheerful
 - ☒ 2. harmful
 - ☒ 3. beautiful
 - ☒ 4. fruitful

Question ID : 264330168262

Option 1 ID : 264330659916

Option 2 ID : 264330659918

Option 3 ID : 264330659917

Option 4 ID : 264330659915

Status : Answered

Chosen Option : 3

Comprehension:

In the following passage, some words have been deleted. Read the passage carefully and select the most appropriate option to fill in each blank.

Many years ago, when the art of stunting plants was quite unheard of 1. _____ in remote areas of India, Buddhist monks in isolated monasteries in Tibet stunted trees like the oak, orange tree, peepal tree, etc, watching with 2. _____ the tree still flowering and 3. _____ fruit regardless of this 'deformity'. Since the trees looked so artistically 4. _____, the art was learnt by some Chinese monks who taught 'Bonsai' making, an art that became most sought 5. _____ in China.

SubQuestion No : 80

Q.80 Select the most appropriate option to fill in blank number 5.

- Ans
- ☒ 1. with
 - ☒ 2. about
 - ☒ 3. for
 - ☒ 4. after

Question ID : 264330168263

Option 1 ID : 264330659921

Option 2 ID : 264330659922

Option 3 ID : 264330659920

Option 4 ID : 264330659919

Status : Answered

Chosen Option : 3

Comprehension:

In the following passage, some words have been deleted. Read the passage carefully and select the most appropriate option to fill in each blank.

Trees are one of the gifts of the nature which are of great (1)_____ for all living beings and environment. They have (2)_____ benefits to living beings providing natural herbs, vegetables, fruits, wood, timber, etc. Trees are the (3)_____ of many birds and insects. They are also considered as the (4)_____ part of the atmosphere which help in reducing pollution. Conserving trees and spreading awareness to plant trees will save the atmosphere from depletion and (5)_____ survival of all forms on earth.

SubQuestion No : 81

Q.81 Select the most appropriate option to fill in blank No. 1.

- Ans
- ☒ 1. revolution
 - ☒ 2. renovation
 - ☒ 3. importance
 - ☒ 4. transformation

Question ID : 264330169784

Option 1 ID : 264330665823

Option 2 ID : 264330665826

Option 3 ID : 264330665824

Option 4 ID : 264330665825

Status : Answered

Chosen Option : 3

Comprehension:

In the following passage, some words have been deleted. Read the passage carefully and select the most appropriate option to fill in each blank.

Trees are one of the gifts of the nature which are of great (1)_____ for all living beings and environment. They have (2)_____ benefits to living beings providing natural herbs, vegetables, fruits, wood, timber, etc. Trees are the (3)_____ of many birds and insects. They are also considered as the (4)_____ part of the atmosphere which help in reducing pollution. Conserving trees and spreading awareness to plant trees will save the atmosphere from depletion and (5)_____ survival of all forms on earth.

SubQuestion No : 82

Q.82 Select the most appropriate option to fill in blank No. 2.

- Ans
- ☒ 1. ample
 - ☒ 2. less
 - ☒ 3. minor
 - ☒ 4. acute

Question ID : 264330169785

Option 1 ID : 264330665829

Option 2 ID : 264330665827

Option 3 ID : 264330665830

Option 4 ID : 264330665828

Status : Answered

Chosen Option : 1

Comprehension:

In the following passage, some words have been deleted. Read the passage carefully and select the most appropriate option to fill in each blank.

Trees are one of the gifts of the nature which are of great (1)_____ for all living beings and environment. They have (2)_____ benefits to living beings providing natural herbs, vegetables, fruits, wood, timber, etc. Trees are the (3)_____ of many birds and insects. They are also considered as the (4)_____ part of the atmosphere which help in reducing pollution. Conserving trees and spreading awareness to plant trees will save the atmosphere from depletion and (5)_____ survival of all forms on earth.

SubQuestion No : 83

Q.83 Select the most appropriate option to fill in blank No. 3.

- Ans ☒ 1. terrain
☒ 2. abode
☒ 3. refuge
☒ 4. asylum

Question ID : 264330169786

Option 1 ID : 264330665834

Option 2 ID : 264330665832

Option 3 ID : 264330665831

Option 4 ID : 264330665833

Status : Answered

Chosen Option : 3

Comprehension:

In the following passage, some words have been deleted. Read the passage carefully and select the most appropriate option to fill in each blank.

Trees are one of the gifts of the nature which are of great (1)_____ for all living beings and environment. They have (2)_____ benefits to living beings providing natural herbs, vegetables, fruits, wood, timber, etc. Trees are the (3)_____ of many birds and insects. They are also considered as the (4)_____ part of the atmosphere which help in reducing pollution. Conserving trees and spreading awareness to plant trees will save the atmosphere from depletion and (5)_____ survival of all forms on earth.

SubQuestion No : 84

Q.84 Select the most appropriate option to fill in blank No. 4.

- Ans ☒ 1. trivial
☒ 2. petty
☒ 3. superficial
☒ 4. integral

Question ID : 264330169787

Option 1 ID : 264330665835

Option 2 ID : 264330665837

Option 3 ID : 264330665838

Option 4 ID : 264330665836

Status : Answered

Chosen Option : 2

Comprehension:

In the following passage, some words have been deleted. Read the passage carefully and select the most appropriate option to fill in each blank.

Trees are one of the gifts of the nature which are of great (1)_____ for all living beings and environment. They have (2)_____ benefits to living beings providing natural herbs, vegetables, fruits, wood, timber, etc. Trees are the (3)_____ of many birds and insects. They are also considered as the (4)_____ part of the atmosphere which help in reducing pollution. Conserving trees and spreading awareness to plant trees will save the atmosphere from depletion and (5)_____ survival of all forms on earth.

SubQuestion No : 85

Q.85 Select the most appropriate option to fill in blank No. 5.

Ans

☒ 1. refuse

☒ 2. rebuke

☒ 3. ensure

☒ 4. pretend

Question ID : **264330169788**

Option 1 ID : **264330665839**

Option 2 ID : **264330665841**

Option 3 ID : **264330665840**

Option 4 ID : **264330665842**

Status : **Answered**

Chosen Option : **3**

Comprehension:

Read the given passage and answer the questions that follow.

Emma had always been a driven and ambitious student. She had a passion for science and medicine, and her dream was to become a doctor. She worked tirelessly throughout her college years, studying long hours and sacrificing her social life in pursuit of her goals. Despite the challenges, Emma was determined to succeed and make a difference in the world.

One fateful evening, while driving home from a late-night study session, Emma's life changed forever. A car came out of nowhere and collided with her vehicle, sending it spinning out of control. When the dust settled, Emma found herself trapped inside the wreckage, unable to move or even scream for help. The accident had left her with a broken leg and several other injuries. Emma was in shock and couldn't believe what had happened to her. She was devastated to think that all her hard work and dedication had been for nothing. She would now have to put her dreams on hold and spend months recovering from her injuries.

As Emma lay in the hospital, she was consumed with anger and frustration. She couldn't understand why this had happened to her, why her life had been turned upside down in an instant. She felt alone and helpless, unable to find any sense of purpose or meaning in her suffering. But as the days turned into weeks, Emma began to notice something different about the people around her. She met a nurse named Mary, who had been working at the hospital for over twenty years. Mary had a kind and caring personality, which Emma found comforting during her stay. She also met a patient named John, who had been in a car accident similar to Emma's. John had suffered a spinal cord injury and was paralysed from the waist down.

Despite his condition, John was always positive and never gave up hope.

Emma soon realised that the accident had brought her into contact with these amazing people and had given her the opportunity to learn from them. She learned from Mary how to be kind and caring towards others, even in difficult situations. She learned from John how to be positive and never give up, even when things seem impossible. After several months of recovery, Emma was able to walk again, but she still faced many challenges. She had to work extra hard to catch up with her studies and she had to adjust to life with a permanent scar on her leg. However, she realised that the accident had taught her valuable lessons that would help her become a better doctor. She had learned to empathise with her patients and to be grateful for her own health.

Years later, Emma became a successful doctor and was known for her compassion and empathy towards her patients. She often thought back to the accident and realised that it had been a turning point in her life. It had forced her to slow down and appreciate the small things in life. She was grateful for the people she had met during her recovery and realised that without the accident, she may never have met them. This story reflects that whatever happens, it happens for good. Even though the accident had seemed like a setback for Emma, it had brought her into contact with amazing people and taught her valuable lessons that she would carry with her for the rest of her life. Sometimes, the things we think are obstacles are actually opportunities in disguise. It is up to us to find the silver lining and make the best of every situation.

SubQuestion No : 86

Q.86 What was Emma's dream before the accident?

- Ans** ☒ 1. To become a doctor
☐ 2. To become a teacher
☐ 3. To become a lawyer
☐ 4. To become a nurse

Question ID : 264330168877

Option 1 ID : 264330662316

Option 2 ID : 264330662317

Option 3 ID : 264330662318

Option 4 ID : 264330662315

Status : Answered

Chosen Option : 1

Comprehension:

Read the given passage and answer the questions that follow.

Emma had always been a driven and ambitious student. She had a passion for science and medicine, and her dream was to become a doctor. She worked tirelessly throughout her college years, studying long hours and sacrificing her social life in pursuit of her goals. Despite the challenges, Emma was determined to succeed and make a difference in the world.

One fateful evening, while driving home from a late-night study session, Emma's life changed forever. A car came out of nowhere and collided with her vehicle, sending it spinning out of control. When the dust settled, Emma found herself trapped inside the wreckage, unable to move or even scream for help. The accident had left her with a broken leg and several other injuries. Emma was in shock and couldn't believe what had happened to her. She was devastated to think that all her hard work and dedication had been for nothing. She would now have to put her dreams on hold and spend months recovering from her injuries.

As Emma lay in the hospital, she was consumed with anger and frustration. She couldn't understand why this had happened to her, why her life had been turned upside down in an instant. She felt alone and helpless, unable to find any sense of purpose or meaning in her suffering. But as the days turned into weeks, Emma began to notice something different about the people around her. She met a nurse named Mary, who had been working at the hospital for over twenty years. Mary had a kind and caring personality, which Emma found comforting during her stay. She also met a patient named John, who had been in a car accident similar to Emma's. John had suffered a spinal cord injury and was paralysed from the waist down.

Despite his condition, John was always positive and never gave up hope.

Emma soon realised that the accident had brought her into contact with these amazing people and had given her the opportunity to learn from them. She learned from Mary how to be kind and caring towards others, even in difficult situations. She learned from John how to be positive and never give up, even when things seem impossible. After several months of recovery, Emma was able to walk again, but she still faced many challenges. She had to work extra hard to catch up with her studies and she had to adjust to life with a permanent scar on her leg. However, she realised that the accident had taught her valuable lessons that would help her become a better doctor. She had learned to empathise with her patients and to be grateful for her own health.

Years later, Emma became a successful doctor and was known for her compassion and empathy towards her patients. She often thought back to the accident and realised that it had been a turning point in her life. It had forced her to slow down and appreciate the small things in life. She was grateful for the people she had met during her recovery and realised that without the accident, she may never have met them. This story reflects that whatever happens, it happens for good. Even though the accident had seemed like a setback for Emma, it had brought her into contact with amazing people and taught her valuable lessons that she would carry with her for the rest of her life. Sometimes, the things we think are obstacles are actually opportunities in disguise. It is up to us to find the silver lining and make the best of every situation.

SubQuestion No : 87

Q.87 What is the significance of the patient John in the story?

- Ans ☒ 1. He is a doctor who specialises in spinal cord injuries and helps Emma learn about the medical field
- ☒ 2. He helps Emma recover from her injuries and shows her how to be positive and never give up
- ☒ 3. He teaches Emma how to be kind and caring towards others, even in difficult situations
- ☒ 4. He is a fellow colleague of Emma's who is also recovering from an injury

Question ID : 264330168880

Option 1 ID : 264330662330

Option 2 ID : 264330662328

Option 3 ID : 264330662327

Option 4 ID : 264330662329

Status : Answered

Chosen Option : 2

Comprehension:

Read the given passage and answer the questions that follow.

Emma had always been a driven and ambitious student. She had a passion for science and medicine, and her dream was to become a doctor. She worked tirelessly throughout her college years, studying long hours and sacrificing her social life in pursuit of her goals. Despite the challenges, Emma was determined to succeed and make a difference in the world.

One fateful evening, while driving home from a late-night study session, Emma's life changed forever. A car came out of nowhere and collided with her vehicle, sending it spinning out of control. When the dust settled, Emma found herself trapped inside the wreckage, unable to move or even scream for help. The accident had left her with a broken leg and several other injuries. Emma was in shock and couldn't believe what had happened to her. She was devastated to think that all her hard work and dedication had been for nothing. She would now have to put her dreams on hold and spend months recovering from her injuries.

As Emma lay in the hospital, she was consumed with anger and frustration. She couldn't understand why this had happened to her, why her life had been turned upside down in an instant. She felt alone and helpless, unable to find any sense of purpose or meaning in her suffering. But as the days turned into weeks, Emma began to notice something different about the people around her. She met a nurse named Mary, who had been working at the hospital for over twenty years. Mary had a kind and caring personality, which Emma found comforting during her stay. She also met a patient named John, who had been in a car accident similar to Emma's. John had suffered a spinal cord injury and was paralysed from the waist down.

Despite his condition, John was always positive and never gave up hope.

Emma soon realised that the accident had brought her into contact with these amazing people and had given her the opportunity to learn from them. She learned from Mary how to be kind and caring towards others, even in difficult situations. She learned from John how to be positive and never give up, even when things seem impossible. After several months of recovery, Emma was able to walk again, but she still faced many challenges. She had to work extra hard to catch up with her studies and she had to adjust to life with a permanent scar on her leg. However, she realised that the accident had taught her valuable lessons that would help her become a better doctor. She had learned to empathise with her patients and to be grateful for her own health.

Years later, Emma became a successful doctor and was known for her compassion and empathy towards her patients. She often thought back to the accident and realised that it had been a turning point in her life. It had forced her to slow down and appreciate the small things in life. She was grateful for the people she had met during her recovery and realised that without the accident, she may never have met them. This story reflects that whatever happens, it happens for good. Even though the accident had seemed like a setback for Emma, it had brought her into contact with amazing people and taught her valuable lessons that she would carry with her for the rest of her life. Sometimes, the things we think are obstacles are actually opportunities in disguise. It is up to us to find the silver lining and make the best of every situation.

SubQuestion No : 88

Q.88 Find the ANTONYM of the word 'aggravate' from the passage.

- Ans ☒ 1. Irritate
☒ 2. Dedicate
☒ 3. Oblige
☒ 4. Tease

Question ID : 264330168881

Option 1 ID : 264330662331

Option 2 ID : 264330662334

Option 3 ID : 264330662332

Option 4 ID : 264330662333

Status : Marked For Review

Chosen Option : 3

Comprehension:

Read the given passage and answer the questions that follow.

Emma had always been a driven and ambitious student. She had a passion for science and medicine, and her dream was to become a doctor. She worked tirelessly throughout her college years, studying long hours and sacrificing her social life in pursuit of her goals. Despite the challenges, Emma was determined to succeed and make a difference in the world.

One fateful evening, while driving home from a late-night study session, Emma's life changed forever. A car came out of nowhere and collided with her vehicle, sending it spinning out of control. When the dust settled, Emma found herself trapped inside the wreckage, unable to move or even scream for help. The accident had left her with a broken leg and several other injuries. Emma was in shock and couldn't believe what had happened to her. She was devastated to think that all her hard work and dedication had been for nothing. She would now have to put her dreams on hold and spend months recovering from her injuries.

As Emma lay in the hospital, she was consumed with anger and frustration. She couldn't understand why this had happened to her, why her life had been turned upside down in an instant. She felt alone and helpless, unable to find any sense of purpose or meaning in her suffering. But as the days turned into weeks, Emma began to notice something different about the people around her. She met a nurse named Mary, who had been working at the hospital for over twenty years. Mary had a kind and caring personality, which Emma found comforting during her stay. She also met a patient named John, who had been in a car accident similar to Emma's. John had suffered a spinal cord injury and was paralysed from the waist down.

Despite his condition, John was always positive and never gave up hope.

Emma soon realised that the accident had brought her into contact with these amazing people and had given her the opportunity to learn from them. She learned from Mary how to be kind and caring towards others, even in difficult situations. She learned from John how to be positive and never give up, even when things seem impossible. After several months of recovery, Emma was able to walk again, but she still faced many challenges. She had to work extra hard to catch up with her studies and she had to adjust to life with a permanent scar on her leg. However, she realised that the accident had taught her valuable lessons that would help her become a better doctor. She had learned to empathise with her patients and to be grateful for her own health.

Years later, Emma became a successful doctor and was known for her compassion and empathy towards her patients. She often thought back to the accident and realised that it had been a turning point in her life. It had forced her to slow down and appreciate the small things in life. She was grateful for the people she had met during her recovery and realised that without the accident, she may never have met them. This story reflects that whatever happens, it happens for good. Even though the accident had seemed like a setback for Emma, it had brought her into contact with amazing people and taught her valuable lessons that she would carry with her for the rest of her life. Sometimes, the things we think are obstacles are actually opportunities in disguise. It is up to us to find the silver lining and make the best of every situation.

SubQuestion No : 89

Q.89 What challenges did Emma face after her recovery?

- Ans ☒ 1. She had to adjust to life with a permanent scar on her arm.
- ☒ 2. She had to adjust to life with a permanent scar on her leg.
- ☒ 3. She had to adjust to life with a permanent scar on her back.
- ☒ 4. She had to adjust to life with a permanent scar on her face.

Question ID : 264330168878

Option 1 ID : 264330662320

Option 2 ID : 264330662319

Option 3 ID : 264330662322

Option 4 ID : 264330662321

Status : Answered

Chosen Option : 2

Comprehension:

Read the given passage and answer the questions that follow.

Emma had always been a driven and ambitious student. She had a passion for science and medicine, and her dream was to become a doctor. She worked tirelessly throughout her college years, studying long hours and sacrificing her social life in pursuit of her goals. Despite the challenges, Emma was determined to succeed and make a difference in the world.

One fateful evening, while driving home from a late-night study session, Emma's life changed forever. A car came out of nowhere and collided with her vehicle, sending it spinning out of control. When the dust settled, Emma found herself trapped inside the wreckage, unable to move or even scream for help. The accident had left her with a broken leg and several other injuries. Emma was in shock and couldn't believe what had happened to her. She was devastated to think that all her hard work and dedication had been for nothing. She would now have to put her dreams on hold and spend months recovering from her injuries.

As Emma lay in the hospital, she was consumed with anger and frustration. She couldn't understand why this had happened to her, why her life had been turned upside down in an instant. She felt alone and helpless, unable to find any sense of purpose or meaning in her suffering. But as the days turned into weeks, Emma began to notice something different about the people around her. She met a nurse named Mary, who had been working at the hospital for over twenty years. Mary had a kind and caring personality, which Emma found comforting during her stay. She also met a patient named John, who had been in a car accident similar to Emma's. John had suffered a spinal cord injury and was paralysed from the waist down.

Despite his condition, John was always positive and never gave up hope.

Emma soon realised that the accident had brought her into contact with these amazing people and had given her the opportunity to learn from them. She learned from Mary how to be kind and caring towards others, even in difficult situations. She learned from John how to be positive and never give up, even when things seem impossible. After several months of recovery, Emma was able to walk again, but she still faced many challenges. She had to work extra hard to catch up with her studies and she had to adjust to life with a permanent scar on her leg. However, she realised that the accident had taught her valuable lessons that would help her become a better doctor. She had learned to empathise with her patients and to be grateful for her own health.

Years later, Emma became a successful doctor and was known for her compassion and empathy towards her patients. She often thought back to the accident and realised that it had been a turning point in her life. It had forced her to slow down and appreciate the small things in life. She was grateful for the people she had met during her recovery and realised that without the accident, she may never have met them. This story reflects that whatever happens, it happens for good. Even though the accident had seemed like a setback for Emma, it had brought her into contact with amazing people and taught her valuable lessons that she would carry with her for the rest of her life. Sometimes, the things we think are obstacles are actually opportunities in disguise. It is up to us to find the silver lining and make the best of every situation.

SubQuestion No : 90

Q.90 What is the central theme of the story?

- Ans ☒ 1. The value of hard work and dedication in achieving one's dreams
- ☒ 2. The idea that obstacles can present unexpected opportunities
- ☒ 3. The importance of staying positive in difficult situations
- ☒ 4. The challenges of recovering from a serious injury

Question ID : 264330168879

Option 1 ID : 264330662325

Option 2 ID : 264330662326

Option 3 ID : 264330662323

Option 4 ID : 264330662324

Status : Answered

Chosen Option : 3

Comprehension:

Read the given passage and answer the questions that follow.

An important skill we all need to learn, in my opinion, is not to have preconceived notions about anything. Having said that I also know how difficult a thing it can be!

To drop the burden of preconceived notions, we need to unlearn a few things, which again is a tough thing to do. Very early on, we start cramming our brains with ideas and opinions. These notions might have entered our mind from our family, parents, society or some of the books we might have read. We need to understand the fact that everything in life keeps changing and we just cannot stick to something only because that thought might have entered our brains years back!

I always thought ice-creams or chilled items were bad for a child having a cold or a running nose. I was terribly surprised when a GP in London told my four-year-old grandson with a cold to go ahead and have a popsicle. Later I found out that there is no scientific evidence to prove that an ice-cream or a popsicle can aggravate a cold!

SubQuestion No : 91

Q.91 Select the statement that is correct according to the passage.

- Ans ☒ 1. The author's grandson was advised to consume ice-creams to treat his cold.
- ☒ 2. Unlearning preconceived notions is a tough thing to do.
- ☒ 3. Scientific research has proven that ice-creams worsen cold symptoms.
- ☒ 4. Unlearning preconceived notions is an effortless process.

Question ID : 264330170219

Option 1 ID : 264330667548

Option 2 ID : 264330667549

Option 3 ID : 264330667547

Option 4 ID : 264330667550

Status : Answered

Chosen Option : 2

Comprehension:

Read the given passage and answer the questions that follow.

An important skill we all need to learn, in my opinion, is not to have preconceived notions about anything. Having said that I also know how difficult a thing it can be!

To drop the burden of preconceived notions, we need to unlearn a few things, which again is a tough thing to do. Very early on, we start cramming our brains with ideas and opinions. These notions might have entered our mind from our family, parents, society or some of the books we might have read. We need to understand the fact that everything in life keeps changing and we just cannot stick to something only because that thought might have entered our brains years back!

I always thought ice-creams or chilled items were bad for a child having a cold or a running nose. I was terribly surprised when a GP in London told my four-year-old grandson with a cold to go ahead and have a popsicle. Later I found out that there is no scientific evidence to prove that an ice-cream or a popsicle can aggravate a cold!

SubQuestion No : 92

Q.92 Select the most appropriate title for the given passage.

- Ans ☒ 1. Challenging the Thought Process
- ☒ 2. Unlearning Preconceived Notions
- ☒ 3. Evaluating Our Superstitions
- ☒ 4. The Power of Our Mind

Question ID : 264330170216

Option 1 ID : 264330667538

Option 2 ID : 264330667535

Option 3 ID : 264330667536

Option 4 ID : 264330667537

Status : Answered

Chosen Option : 2

Comprehension:

Read the given passage and answer the questions that follow.

An important skill we all need to learn, in my opinion, is not to have preconceived notions about anything. Having said that I also know how difficult a thing it can be!

To drop the burden of preconceived notions, we need to unlearn a few things, which again is a tough thing to do. Very early on, we start cramming our brains with ideas and opinions.

These notions might have entered our mind from our family, parents, society or some of the books we might have read. We need to understand the fact that everything in life keeps changing and we just cannot stick to something only because that thought might have entered our brains years back!

I always thought ice-creams or chilled items were bad for a child having a cold or a running nose. I was terribly surprised when a GP in London told my four-year-old grandson with a cold to go ahead and have a popsicle. Later I found out that there is no scientific evidence to prove that an ice-cream or a popsicle can aggravate a cold!

SubQuestion No : 93

Q.93 Select the most appropriate theme of the passage.

- Ans ☒ 1. The need for evidence-based decision making
- ☒ 2. The significance of seeking professional advice
- ☒ 3. The influence of personal experiences on our beliefs
- ☒ 4. The role of scientific evidence in debunking misconceptions

Question ID : 264330170220

Option 1 ID : 264330667554

Option 2 ID : 264330667553

Option 3 ID : 264330667552

Option 4 ID : 264330667551

Status : Answered

Chosen Option : 4

Comprehension:

Read the given passage and answer the questions that follow.

An important skill we all need to learn, in my opinion, is not to have preconceived notions about anything. Having said that I also know how difficult a thing it can be!

To drop the burden of preconceived notions, we need to unlearn a few things, which again is a tough thing to do. Very early on, we start cramming our brains with ideas and opinions.

These notions might have entered our mind from our family, parents, society or some of the books we might have read. We need to understand the fact that everything in life keeps changing and we just cannot stick to something only because that thought might have entered our brains years back!

I always thought ice-creams or chilled items were bad for a child having a cold or a running nose. I was terribly surprised when a GP in London told my four-year-old grandson with a cold to go ahead and have a popsicle. Later I found out that there is no scientific evidence to prove that an ice-cream or a popsicle can aggravate a cold!

SubQuestion No : 94

Q.94 Select the most appropriate ANTONYM of the given word used in the passage.
Aggravate

- Ans ☒ 1. Destroy
- ☒ 2. Pester
- ☒ 3. Annihilate
- ☒ 4. Alleviate

Question ID : 264330170218

Option 1 ID : 264330667543

Option 2 ID : 264330667545

Option 3 ID : 264330667544

Option 4 ID : 264330667546

Status : Answered

Chosen Option : 4

Comprehension:

Read the given passage and answer the questions that follow.

An important skill we all need to learn, in my opinion, is not to have preconceived notions about anything. Having said that I also know how difficult a thing it can be!

To drop the burden of preconceived notions, we need to unlearn a few things, which again is a tough thing to do. Very early on, we start cramming our brains with ideas and opinions.

These notions might have entered our mind from our family, parents, society or some of the books we might have read. We need to understand the fact that everything in life keeps changing and we just cannot stick to something only because that thought might have entered our brains years back!

I always thought ice-creams or chilled items were bad for a child having a cold or a running nose. I was terribly surprised when a GP in London told my four-year-old grandson with a cold to go ahead and have a popsicle. Later I found out that there is no scientific evidence to prove that an ice-cream or a popsicle can aggravate a cold!

SubQuestion No : 95

Q.95 What is the tone of the passage?

- Ans
- ☒ 1. Sarcastic
 - ☒ 2. Humorous
 - ☒ 3. Reflective
 - ☒ 4. Humanistic

Question ID : 264330170217

Option 1 ID : 264330667541

Option 2 ID : 264330667542

Option 3 ID : 264330667540

Option 4 ID : 264330667539

Status : Answered

Chosen Option : 3

Comprehension:

Read the given passage and answer the questions that follow.

The term 'personalised learning' has been in vogue for a long time. Earlier, it referred to a one-to-one tutoring system, mostly for the privileged. Today, it refers to learning that prioritises an individual student's requirements and uses flexible instructional practices in terms of content, pace and materials. Learning need not be linear as, sometimes, learners may have to take a step back if not equipped with the necessary schemata to understand the content.

The entire learning process becomes student-centric and the students are encouraged to design their own learning pathways.

Artificial Intelligence (AI) and Data Analytics play a major role in online and hybrid learning platforms. Globally, HEIs are introducing programmes where AI provides the platform to launch personalised learning. Technology provides a variety of materials in various formats to suit different students and monitor and assess their progress. However, it does not undermine the teacher's role. There are areas such as communication and collaborative skills, and emotional intelligence, which require human intervention. Therefore, the role of teachers in personalised learning remains as important as it is in traditional learning. AI can never replace educators; it can only enhance and support personalised learning by providing automated tasks, assessment platforms and feedback.

Many paths of study emerge and all ultimately merge with the curriculum's common learning outcome. Thus, the pattern of education becomes student-centric. This systemic change gives a new dimension to the teaching-learning process where teaching becomes counseling, and the teacher becomes a mentor. The students are motivated to take control of their learning and become autonomous.

SubQuestion No : 96

Q.96 Select an appropriate title for the given passage.

- Ans
- ☒ 1. Technology Formats to Assess Students' Intellect
 - ☒ 2. The Latest Trends of Content
 - ☒ 3. Student-Centric Pedagogy Fosters Learner Autonomy
 - ☒ 4. Personalised Learning Aims at Teachers' Strength

Question ID : 264330169184

Option 1 ID : 264330663530

Option 2 ID : 264330663527

Option 3 ID : 264330663528

Option 4 ID : 264330663529

Status : Not Answered

Chosen Option : --

Comprehension:

Read the given passage and answer the questions that follow.

The term 'personalised learning' has been in vogue for a long time. Earlier, it referred to a one-to-one tutoring system, mostly for the privileged. Today, it refers to learning that prioritises an individual student's requirements and uses flexible instructional practices in terms of content, pace and materials. Learning need not be linear as, sometimes, learners may have to take a step back if not equipped with the necessary schemata to understand the content. The entire learning process becomes student-centric and the students are encouraged to design their own learning pathways.

Artificial Intelligence (AI) and Data Analytics play a major role in online and hybrid learning platforms. Globally, HEIs are introducing programmes where AI provides the platform to launch personalised learning. Technology provides a variety of materials in various formats to suit different students and monitor and assess their progress. However, it does not undermine the teacher's role. There are areas such as communication and collaborative skills, and emotional intelligence, which require human intervention. Therefore, the role of teachers in personalised learning remains as important as it is in traditional learning. AI can never replace educators; it can only enhance and support personalised learning by providing automated tasks, assessment platforms and feedback.

Many paths of study emerge and all ultimately merge with the curriculum's common learning outcome. Thus, the pattern of education becomes student-centric. This systemic change gives a new dimension to the teaching-learning process where teaching becomes counseling, and the teacher becomes a mentor. The students are motivated to take control of their learning and become autonomous.

SubQuestion No : 97

Q.97 What is the best summary of the given passage?

- Ans**
- ☒ 1. Personalised learning is tailored to the individual needs of each student.
 - ☐ 2. Student-centric learning engages students as a facilitator in their own learning.
 - ☐ 3. The role of teachers in personalised learning does not remain as important as it is in traditional learning.
 - ☐ 4. Artificial Intelligence includes mimicking human cognitive activity and giving freedom to the students to study in a way that suits them partially.

Question ID : 264330169186

Option 1 ID : 264330663535

Option 2 ID : 264330663537

Option 3 ID : 264330663538

Option 4 ID : 264330663536

Status : Answered

Chosen Option : 2

Comprehension:

Read the given passage and answer the questions that follow.

The term 'personalised learning' has been in vogue for a long time. Earlier, it referred to a one-to-one tutoring system, mostly for the privileged. Today, it refers to learning that prioritises an individual student's requirements and uses flexible instructional practices in terms of content, pace and materials. Learning need not be linear as, sometimes, learners may have to take a step back if not equipped with the necessary schemata to understand the content. The entire learning process becomes student-centric and the students are encouraged to design their own learning pathways.

Artificial Intelligence (AI) and Data Analytics play a major role in online and hybrid learning platforms. Globally, HEIs are introducing programmes where AI provides the platform to launch personalised learning. Technology provides a variety of materials in various formats to suit different students and monitor and assess their progress. However, it does not undermine the teacher's role. There are areas such as communication and collaborative skills, and emotional intelligence, which require human intervention. Therefore, the role of teachers in personalised learning remains as important as it is in traditional learning. AI can never replace educators; it can only enhance and support personalised learning by providing automated tasks, assessment platforms and feedback.

Many paths of study emerge and all ultimately merge with the curriculum's common learning outcome. Thus, the pattern of education becomes student-centric. This systemic change gives a new dimension to the teaching-learning process where teaching becomes counseling, and the teacher becomes a mentor. The students are motivated to take control of their learning and become autonomous.

SubQuestion No : 98

Q.98 The most appropriate synonym of the word 'linear' is:

- Ans
- ☒ 1. variable
 - ☒ 2. rapid
 - ☒ 3. ambiguous
 - ☒ 4. continuous

Question ID : 264330169187

Option 1 ID : 264330663541

Option 2 ID : 264330663539

Option 3 ID : 264330663540

Option 4 ID : 264330663542

Status : Not Answered

Chosen Option : --

Comprehension:

Read the given passage and answer the questions that follow.

The term 'personalised learning' has been in vogue for a long time. Earlier, it referred to a one-to-one tutoring system, mostly for the privileged. Today, it refers to learning that prioritises an individual student's requirements and uses flexible instructional practices in terms of content, pace and materials. Learning need not be linear as, sometimes, learners may have to take a step back if not equipped with the necessary schemata to understand the content. The entire learning process becomes student-centric and the students are encouraged to design their own learning pathways.

Artificial Intelligence (AI) and Data Analytics play a major role in online and hybrid learning platforms. Globally, HEIs are introducing programmes where AI provides the platform to launch personalised learning. Technology provides a variety of materials in various formats to suit different students and monitor and assess their progress. However, it does not undermine the teacher's role. There are areas such as communication and collaborative skills, and emotional intelligence, which require human intervention. Therefore, the role of teachers in personalised learning remains as important as it is in traditional learning. AI can never replace educators; it can only enhance and support personalised learning by providing automated tasks, assessment platforms and feedback.

Many paths of study emerge and all ultimately merge with the curriculum's common learning outcome. Thus, the pattern of education becomes student-centric. This systemic change gives a new dimension to the teaching-learning process where teaching becomes counseling, and the teacher becomes a mentor. The students are motivated to take control of their learning and become autonomous.

SubQuestion No : 99

Q.99 What is the tone of the given passage?

- Ans
- ☒ 1. Outraged and angry
 - ☒ 2. Humorous and amusing
 - ☒ 3. Sorrowful and sympathetic
 - ☒ 4. Supportive and encouraging

Question ID : 264330169188

Option 1 ID : 264330663545

Option 2 ID : 264330663546

Option 3 ID : 264330663543

Option 4 ID : 264330663544

Status : Answered

Chosen Option : 3

Comprehension:

Read the given passage and answer the questions that follow.

The term 'personalised learning' has been in vogue for a long time. Earlier, it referred to a one-to-one tutoring system, mostly for the privileged. Today, it refers to learning that prioritises an individual student's requirements and uses flexible instructional practices in terms of content, pace and materials. Learning need not be linear as, sometimes, learners may have to take a step back if not equipped with the necessary schemata to understand the content. The entire learning process becomes student-centric and the students are encouraged to design their own learning pathways.

Artificial Intelligence (AI) and Data Analytics play a major role in online and hybrid learning platforms. Globally, HEIs are introducing programmes where AI provides the platform to launch personalised learning. Technology provides a variety of materials in various formats to suit different students and monitor and assess their progress. However, it does not undermine the teacher's role. There are areas such as communication and collaborative skills, and emotional intelligence, which require human intervention. Therefore, the role of teachers in personalised learning remains as important as it is in traditional learning. AI can never replace educators; it can only enhance and support personalised learning by providing automated tasks, assessment platforms and feedback.

Many paths of study emerge and all ultimately merge with the curriculum's common learning outcome. Thus, the pattern of education becomes student-centric. This systemic change gives a new dimension to the teaching-learning process where teaching becomes counseling, and the teacher becomes a mentor. The students are motivated to take control of their learning and become autonomous.

SubQuestion No : 100

Q.100 The passage supports which of the following statements?

- Ans ☒ 1. The pattern of education has become teacher-centric today.
- ☒ 2. The role of teachers in personalised learning remains the same as in traditional learning.
- ☒ 3. Flexible instructional practices prioritise the learning objectives of the curriculum.
- ☒ 4. Artificial Intelligence and Data Analytics enhance assessment platforms.

Question ID : **264330169185**

Option 1 ID : **264330663532**

Option 2 ID : **264330663533**

Option 3 ID : **264330663531**

Option 4 ID : **264330663534**

Status : **Answered**

Chosen Option : **4**