



SSC ONLINE EXAMINATION

CANDIDATE RESPONSE SHEET/GRIEVANCE SYSTEM

View Your Responses

Click Here Grievance About Question

Click Here View Grievance Questions

Admin loggedin.[Logout]

Exam Name : Steno Grade C and D

Test Date : 06 Aug 2025

Test Time : 05:30 PM

Centre : MPIND298_INDORE INTERNATIONAL COLLEGE_210402

Correct Option selected

Wrong Option selected

Correct Option

Not Answered

PART - A (General Intelligence & Reasoning).

Q.No: 1

In each of the following questions, a pair of words (letter sequences) is given on the left-hand side of the double colon (::), which follows a certain alphabetical pattern. Identify the logic in the first pair and apply the same logic to the third word to find the correct corresponding word from the options.

BOX : ANT :: FIX : ?

निम्नलिखित प्रत्येक प्रश्न में, दोहरे कोलन (::) के बाईं ओर शब्दों का एक युग्म (अक्षर क्रम) दिया गया है, जो एक निश्चित वर्णमाला क्रम का अनुसरण करता है। पहले युग्म में तर्क पहचानिए और विकल्पों में से सही संगत शब्द ज्ञात करने के लिए उसी तर्क को तीसरे शब्द पर लागू कीजिए।

BOX : ANT :: FIX : ?

GHX

GHX

FGW

FGW

HIM

HIM

Q.No: 2

How many triangles are there in the given figure.

दी गई आकृति में कितने त्रिभुज हैं?

10

10

12

12

13

13

14

14

Q.No: 3

If $\triangle : 3 :: \square : ? :: \diamond : 5$

अगर $\triangle : 3 :: \square : ? :: \diamond : 5$

7
7
5
5
4
4
6
6

Q.No: 4	INR 15000 at 10% compound interest compounded quarterly for 2 years yields? 10% चक्रवृद्धि ब्याज पर 2 वर्षों के लिए त्रैमासिक रूप से संयोजित 15000 रुपये का लाभ?
INR 18432	
18432 रुपये	
INR 18276	
18276 रुपये	
INR 18654	
18654 रुपये	
INR 18225	
18225 रुपये	
Not Answered	

Q.No: 5	Guitar, Piano, Violin, Microphone – which is the odd one? गिटार, पियानो, वायलिन, माइक्रोफोन - इनमें से कौन सा विषम है?
Microphone	
माइक्रोफोन	
Violin	
वायलिन	
Piano	
पियानो	
Guitar	
गिटार	

Q.No: 6	A figure consists of a square with 4 equal horizontal and 4 equal vertical lines dividing it into a 5×5 grid. How many squares can be counted in total? एक आकृति में एक वर्ग है जिसमें 4 बराबर क्षैतिज और 4 बराबर ऊर्ध्वाधर रेखाएँ हैं जो इसे 5×5 ग्रिड में विभाजित करती हैं। कुल कितने वर्ग गिने जा सकते हैं?
550	
550	
259	
259	
750	
750	
850	
850	
Not Answered	

Q.No: 7	Identify the water image of: US91Q4M5W3 जल छवि की पहचान करें: US91Q4M5W3
U28J04W2M3	
U28J04W2M3	
U26J04W2M3	

N26J04W2M3
 NS0J04W2M8
 NS0J04W2M8
 N20J04W2M8
 N20J04W2M8

Q.No: 8 Which of the following is the correct sequence?

•

•

•

•

•

•

•

•

निम्नलिखित में से कौन सा अनुक्रम सही है?

•

•

•

•

•

•

•

•

•

•

•

•

•

•

•

•

•

•

•

•

•

•

•

•

•

•

•

•

•

•

•

•

Q.No: 9	<p>Which one of the following figures breaks the pattern followed by the others?</p> <div> </div> <p>A B C D</p> <p>निम्नलिखित में से कौन सी आकृति अन्य आकृतियों द्वारा अपनाए गए पैटर्न को तोड़ती है?</p> <div> </div> <p>A B C D</p>
D	
D	
A	
A	
B	
B	
Q.No: 10	<p>What will be the next number in the series: 8, 12, 24, 60, ?</p> <p>श्रृंखला में अगली संख्या क्या होगी: 8, 12, 24, 60, ?</p>
100	
100	
180	
180	
120	
120	
150	
150	
Not Answered	
Q.No: 11	<p>Find the next term in the given series. 2Z, 4X, 8U, 14Q, ?</p> <p>दी गई श्रृंखला में अगला पद ज्ञात कीजिए। 2Z, 4X, 8U, 14Q, ?</p>
44N	
44N	
33K	
33K	
22I	
22I	
11M	
11M	
Q.No: 12	<p>Choose the missing shape in the analogy.</p> <p>● : ● :: □ : ?</p> <p>सादृश्य में लुप्त आकृति को चुनें।</p> <p>● : ● :: □ : ?</p>

Q.No: 13

In the following series, a specific pattern is followed for both the letters and the numbers. Identify the set of numbers that correctly fills the blanks in the given sequence. Z, 51, X, 68, V, __, T, 84, R, 83, P, __, N, 63, L, 44

निम्नलिखित श्रृंखला में, अक्षरों और संख्याओं दोनों के लिए एक विशिष्ट पैटर्न का पालन किया गया है। दिए गए क्रम में रिक्त स्थानों को सही ढंग से भरने वाले संख्याओं के समूह को पहचानिए। Z, 51, X, 68, V, __, T, 84, R, 83, P, __, N, 63, L, 44

(70, 65)

(70, 65)

(79, 76)

(79, 76)

(75, 70)

(75, 70)

(85, 106)

(85, 106)

Q.No: 14

Criteria to be selected as Junior Analyst

Eligibility Criteria (as on 15-07-2023):

Must have a B.Sc. in Statistics/Mathematics with minimum 65% marks.

Age between 23 and 30 years.

Must have completed a Data Analytics Certificate course.

Should have 2 years of analytical work experience.

Special Case:

If candidate has only 1 year experience, but has Master’s degree in Data Science, refer to Project Manager.

Case:

Meera is 26 years old, B.Sc. in Statistics with 70% marks, has done a certificate course and holds a Master’s in Data Science. She has only 1 year experience.

What should be done in Meera’s case?

जूनियर एनालिस्ट के रूप में चयन के मानदंड

पात्रता मानदंड (15-07-2023 तक):

सांख्यिकी/गणित में न्यूनतम 65% अंकों के साथ बी.एससी. की डिग्री होनी चाहिए।

आयु 23 से 30 वर्ष के बीच।

डेटा एनालिटिक्स सर्टिफिकेट कोर्स पूरा किया होना चाहिए।

विश्लेषणात्मक कार्य का 2 वर्ष का अनुभव होना चाहिए।

विशेष मामला:

यदि उम्मीदवार के पास केवल 1 वर्ष का अनुभव है, लेकिन डेटा साइंस में मास्टर डिग्री है, तो प्रोजेक्ट मैनेजर से संपर्क करें।

मामला:

मीरा 26 वर्ष की है, उसने 70% अंकों के साथ सांख्यिकी में बी.एससी. की डिग्री प्राप्त की है, उसने एक सर्टिफिकेट कोर्स किया है और डेटा साइंस में मास्टर डिग्री प्राप्त की है। उसके पास केवल 1 वर्ष का अनुभव है।

मीरा के मामले में क्या किया जाना चाहिए?

Refer to Project Manager

परियोजना प्रबंधक से संपर्क करें

Select the candidate

उम्मीदवार का चयन करें

Refer to HR

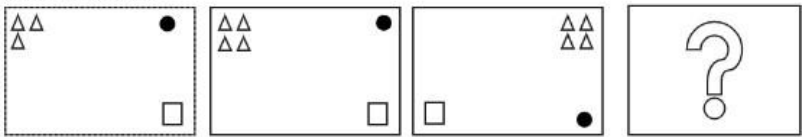
मानव संसाधन विभाग से संपर्क करें

Reject the candidate

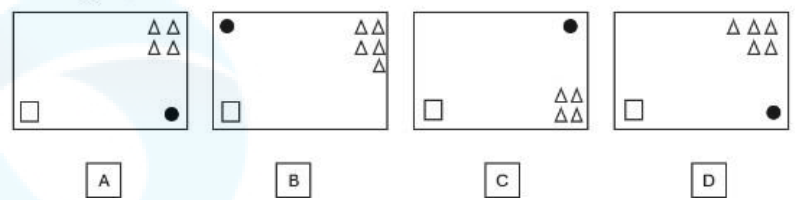
उम्मीदवार को अस्वीकार करें

Q.No: 15 Identify the figure that best fits in place of the question mark.

Question figure:

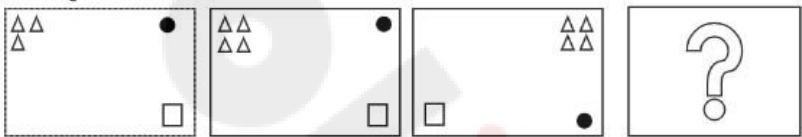


Answer figure:

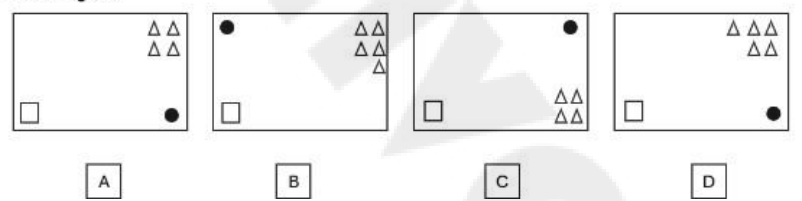


प्रश्न चिह्न के स्थान पर सबसे उपयुक्त आकृति की पहचान करें।

प्रश्न आकृति:



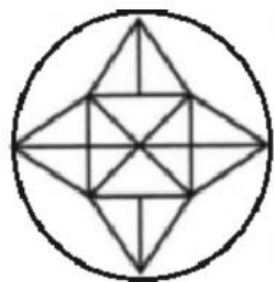
उत्तर आकृति:



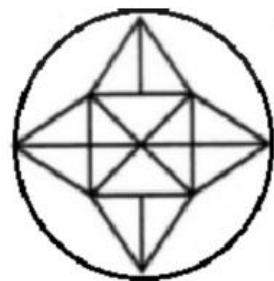
A
A
D
D
C
C
B
B

Not Answered

Q.No: 16 How many triangles are in the given figure?



दी गई आकृति में कितने त्रिभुज हैं?



28
28
18
18
20
20
26
26

Q.No: 17	<p>Read the situation and choose the best judgment:</p> <p>You are shopping in a busy supermarket and notice a person quickly slipping a small, inexpensive item into their bag without scanning or paying for it. The store appears understaffed, and no security personnel are immediately visible.</p> <p>Question: Given this situation, which of the following is the most ethical and responsible action?</p> <p>स्थिति को पढ़ें और सबसे अच्छा निर्णय चुनें:</p> <p>आप एक व्यस्त सुपरमार्केट में खरीदारी कर रहे हैं और देखते हैं कि एक व्यक्ति जल्दी से एक छोटी, सस्ती वस्तु को बिना स्कैन किए या भुगतान किए अपने बैग में डाल रहा है। स्टोर में कर्मचारियों की कमी लग रही है, और कोई सुरक्षाकर्मी तुरंत दिखाई नहीं दे रहा है।</p> <p>प्रश्न: इस स्थिति को देखते हुए, निम्नलिखित में से कौन सा सबसे नैतिक और जिम्मेदार कार्य है?</p> <p>Directly confront the person and demand they pay for the item.</p> <p>व्यक्ति का सीधे सामना करें और मांग करें कि वह वस्तु के लिए भुगतान करे।</p> <p>Ignore the incident, as it is a small item and not your responsibility.</p> <p>इस घटना को नज़रअंदाज़ करें, क्योंकि यह एक छोटी वस्तु है और आपकी ज़िम्मेदारी नहीं है।</p> <p>Take a photo or video of the person as evidence, then post it on social media.</p> <p>उस व्यक्ति की तस्वीर या वीडियो सबूत के तौर पर लें, फिर उसे सोशल मीडिया पर पोस्ट कर दें।</p> <p>Discreetly find a store employee or manager and quietly inform them of what you observed.</p> <p>खामोशी से स्टोर के किसी कर्मचारी या प्रबंधक को ढूँढ़ें और उन्हें बताएं कि आपने क्या देखा।</p>
----------	---

Q.No: 18	<p>Which figure breaks the 3D classification rule?</p> <p>कौन सी आकृति 3डी वर्गीकरण नियम को तोड़ती है?</p>
<input checked="" type="radio"/>	
<input checked="" type="radio"/>	
<input type="radio"/>	
<input type="radio"/>	
<input type="radio"/>	
<input type="radio"/>	
<input type="radio"/>	

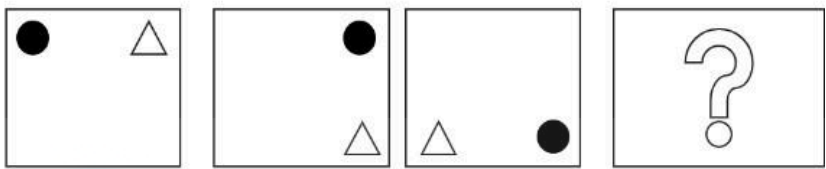
Q.No: 19	<p>Find the odd one out:</p> <p>विषम चुनें:</p>
512	
512	
343	
343	
216	
216	
289	
289	

Q.No: 20	<p>Post: Project Manager – Urban Infrastructure Eligibility Criteria (as on 01-01-2025): B.E./B.Tech in Civil or Urban Engineering with minimum 75% marks. Must have completed MBA in Infrastructure/Project Management with 65% or above. Total experience must be minimum 10 years, out of which at least 3 years as team lead. Age limit: Maximum 42 years. Candidate must have handled at least two full-cycle government projects.</p> <p>Special Clause: If no MBA, but 12+ years of experience including at least 2 years abroad, and led 3+ projects → refer to Advisory Board. If project count is only one, but other conditions are fully met, refer to Infrastructure Commission.</p> <p>Case: Sneha has 78% in B.Tech Civil, no MBA, 13 years of experience including 3 years abroad, and has led 4 projects (all for state government).</p> <p>Question: What should be done in Sneha's case?</p> <p>पद: प्रोजेक्ट मैनेजर - अर्बन इंफ्रास्ट्रक्चर पात्रता मापदंड (दिनांक 01-01-2025 तक): सिविल या अर्बन इंजीनियरिंग में बी.ई./बी.टेक न्यूनतम 75% अंकों के साथ। इंफ्रास्ट्रक्चर/प्रोजेक्ट मैनेजमेंट में एमबीए न्यूनतम 65% या उससे अधिक अंकों के साथ उत्तीर्ण होना चाहिए। कुल अनुभव न्यूनतम 10 वर्ष होना चाहिए, जिसमें से कम से कम 3 वर्ष टीम लीड के रूप में हो। आयु सीमा: अधिकतम 42 वर्ष। उम्मीदवार ने कम से कम दो पूर्ण-चक्र (full-cycle) सरकारी परियोजनाओं को संभाला हो।</p> <p>विशेष खंड: यदि एमबीए नहीं है, लेकिन 12+ वर्षों का अनुभव है जिसमें कम से कम 2 वर्ष विदेश का अनुभव शामिल है, और 3+ परियोजनाओं का नेतृत्व किया है → सलाहकार बोर्ड को भेजें। यदि परियोजनाओं की संख्या केवल एक है, लेकिन अन्य शर्तें पूरी तरह से मिलती हैं, तो इंफ्रास्ट्रक्चर आयोग को भेजें।</p> <p>मामला: स्नेहा के पास बी.टेक सिविल में 78% अंक हैं, कोई एमबीए नहीं है, 13 साल का अनुभव है जिसमें 3 साल विदेश का अनुभव शामिल है, और उसने 4 परियोजनाओं (सभी राज्य सरकार के लिए) का नेतृत्व किया है।</p> <p>प्रश्न: स्नेहा के मामले में क्या किया जाना चाहिए?</p>
	Refer to Infrastructure Commission
	इंफ्रास्ट्रक्चर आयोग को भेजें।
	Refer to Advisory Board
	सलाहकार बोर्ड को भेजें।
	Reject the candidate
	अभ्यर्थी को अस्वीकार करें।
	Select the candidate
	उम्मीदवार का चयन करें।

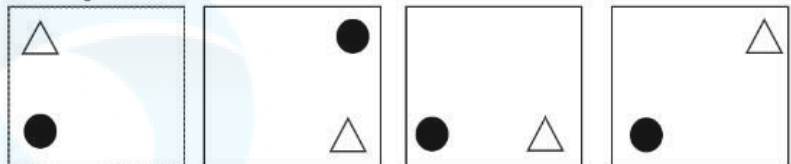
Q.No: 21	<p>What should be at the place of question mark?</p> <p>Question Figure:</p> <p>Answer Figure:</p> <div> <div>A</div> <div>B</div> <div>C</div> <div>D</div> </div>
----------	---

प्रश्न चिह्न के स्थान पर क्या होना चाहिए?

प्रश्न आकृति:



उत्तर आकृति:



A

B

C

D

A

A

D

D

C

C

B

B

Q.No: 22 You are Browse online forums and accidentally stumble upon a link to a publicly accessible cloud storage folder. Upon clicking it, you realize it contains hundreds of documents that appear to be sensitive personal data (like scanned passports, utility bills, and tax documents) belonging to various individuals, indicating a major privacy oversight. Given this situation, which of the following is the most ethical and responsible action?

आप ऑनलाइन फ़ोरम ब्राउज़ कर रहे हैं और गलती से एक ऐसे लिंक पर आ जाते हैं जो सार्वजनिक रूप से सुलभ क्लाउड स्टोरेज फ़ोल्डर का है। उस पर क्लिक करने पर, आपको पता चलता है कि इसमें सैकड़ों दस्तावेज़ हैं जो विभिन्न व्यक्तियों से संबंधित संवेदनशील व्यक्तिगत डेटा (जैसे स्कैन किए गए पासपोर्ट, यूटिलिटी बिल और टैक्स दस्तावेज़) प्रतीत होते हैं, जो एक बड़ी गोपनीयता चूक का संकेत देता है। इस स्थिति को देखते हुए, निम्नलिखित में से कौन सा सबसे नैतिक और जिम्मेदार कार्य है?

Immediately report the vulnerability to the platform's administrator or the relevant cybersecurity authority and avoid accessing the files further.

तत्काल प्लेटफ़ॉर्म के एडमिनिस्ट्रेटर या संबंधित साइबर सुरक्षा प्राधिकरण को इस भेद्यता की रिपोर्ट करें और फ़ाइलों को आगे एक्सेस करने से बचें।

Ignore the folder completely, as it's not your data and you don't want to get involved.

फ़ोल्डर को पूरी तरह से अनदेखा करें, क्योंकि यह आपका डेटा नहीं है और आप इसमें शामिल नहीं होना चाहते।

Download the files to save them, then try to contact a few of the individuals directly to warn them about their leaked data.

फ़ाइलों को सहेजने के लिए डाउनलोड करें, फिर कुछ व्यक्तियों से सीधे संपर्क करने का प्रयास करें ताकि उन्हें उनके लीक हुए डेटा के बारे में चेतावनी दी जा सके।

Copy the link and share it on social media to alert the public and expose the vulnerability.

लिंक को कॉपी करें और सार्वजनिक रूप से अलर्ट करने और भेद्यता को उजागर करने के लिए इसे सोशल मीडिया पर साझा करें।

Q.No: 23 If $5 + 3 = 23$, $6 + 4 = 34$, then $7 + 5 = ?$

यदि $5 + 3 = 23$, $6 + 4 = 34$, तो $7 + 5 = ?$

91

91

51

51

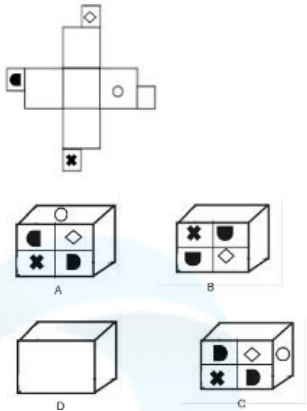
47

47

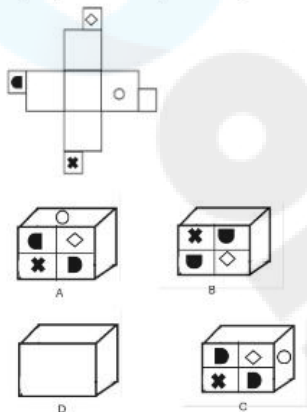
89

89

Q.No: 24 Select the possible cubes that can be formed by folding the given sheet.



दिए गए शीट को मोड़कर बनाए जा सकने वाले संभावित घनों का चयन करें।



A,C and D only

केवल A,C और D

B and C Only

केवल B और C

B,C,D only

केवल B,C,D

A,B,C only .

केवल A,B,C.

Not Answered

Q.No: 25 In each of the following questions, a specific relationship is given between two words. Identify the word that shares a similar semantic relationship with the given pair. Choose the most appropriate option from the four choices given below.

Painter : Canvas :: Author : ?

निम्नलिखित प्रत्येक प्रश्न में दो शब्दों के बीच एक विशिष्ट संबंध दिया गया है। उस शब्द की पहचान कीजिए जो दिए गए युग्म के साथ समान अर्थ संबंध साझा करता है। नीचे दिए गए चार विकल्पों में से सबसे उपयुक्त विकल्प चुनिए।

चित्रकार : कैनवास :: लेखक : ?

Pen

कलम

Publisher

प्रकाशक

Paper

कागज

Plot

कथानक

Q.No: 26 You find a wallet in your school library. What is the most appropriate action?

आपको अपने स्कूल की लाइब्रेरी में एक बटुआ मिलता है। सबसे उचित कार्रवाई क्या होगी?

Keep it for yourself and wait for someone to claim

इसे अपने पास रखें और किसी के दावा करने का इंतजार करें

Take the money and leave the wallet
पैसे ले लें और बटुआ छोड़ दें
Hand it over to the librarian or authority
इसे लाइब्रेरियन या अथॉरिटी को सौंप दें
Ignore it
इसे नजरअंदाज करें

Q.No: 27	Choose the missing number in the following analogy. 4 : 16 :: 6 : ? निम्नलिखित सादृश्य में लुप्त संख्या चुनें। 4 : 16 :: 6 : ?
30	
30	
24	
24	
18	
18	
36	
36	

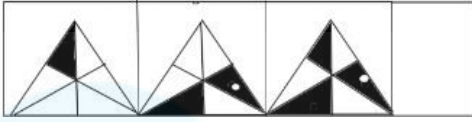
Q.No: 28	In a badminton knockout tournament with 57 players, what is the minimum number of matches needed to determine the winner? 57 खिलाड़ियों वाले एक बैडमिंटन नॉकआउट टूर्नामेंट में विजेता का निर्धारण करने के लिए न्यूनतम कितने मैचों की आवश्यकता है?
58	
58	
57	
57	
56	
56	
55	
55	
Not Answered	

Q.No: 29	In each of the following questions, a specific relationship is given between two words. Identify the word that shares a similar semantic relationship with the given pair. Choose the most appropriate option from the four choices given below. Fire : Heat :: Friction : ? निम्नलिखित प्रत्येक प्रश्न में दो शब्दों के बीच एक विशिष्ट संबंध दिया गया है। उस शब्द की पहचान कीजिए जो दिए गए युग्म के साथ समान अर्थ संबंध साझा करता है। नीचे दिए गए चार विकल्पों में से सबसे उपयुक्त विकल्प चुनिए। आग : ऊष्मा :: घर्षण : ?
Motion	
गति	
Force	
बल	
Burn	
जलाना	
Energy	
ऊर्जा	

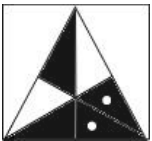
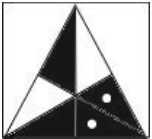
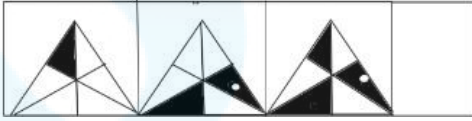
Q.No: 30	If Δ means '+', \square means '-', ∇ means 'x', and \circ means '+', what is the value of: $12 \Delta 8 \nabla 3 \circ 6 \square 5 = ?$ अगर Δ का अर्थ '+' है, \square का अर्थ '-' है, ∇ का अर्थ 'x' है, और \circ का अर्थ '+' है, तो $12 \Delta 8 \nabla 3 \circ 6 \square 5 =$ का मान क्या है?
21	
21	
15	
15	
17	
17	



Q.No: 31 What will come at the place of blank space?



रिक्त स्थान के स्थान पर क्या आएगा?





Not Answered

Q.No: 32

You have four puzzle books on your shelf, and you decide to arrange them in every possible order, moving one book every 30 seconds. How long will it take to arrange all the books?
आपकी शेल्फ पर चार पहेली किताबें हैं, और आप उन्हें हर संभव क्रम में व्यवस्थित करने का फैसला करते हैं, हर 30 सेकंड में एक किताब को आगे बढ़ाते हैं। सभी किताबों को व्यवस्थित करने में कितना समय लगेगा?

24 minutes

24 मिनट

12 minutes

12 मिनट

2 minutes

2 मिनट

4 minutes

4 मिनट

Q.No: 33

If we assign positions to letters A=1, B=2, ..., Z=26, what is the index sum of the word CAT?
अगर हम अक्षरों को स्थान प्रदान करें A=1, B=2, ..., Z=26, तो शब्द CAT का सूचकांक योग क्या है?

27

27

24

24

41

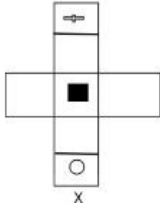
41

48

48

Q.No: 34

Choose the box that is similar to the box formed from the given sheet of paper (X).



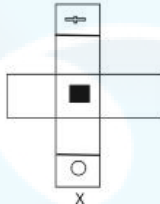
A

B

C

D

उस बॉक्स को चुनें जो दिए गए कागज़ की शीट (X) से बने बॉक्स के समान है।



A

B

C

D

C and D only

केवल सी और डी

A, B, and C

ए, बी, और सी

B, C, and D

बी, सी, और डी

A and B

ए और बी

Not Answered

Q.No: 35

Read the information carefully and identify the correct relationship between the persons mentioned in the question.
A is the brother of B.
C is the mother of A.
D is the daughter of C.
E is the father of D.
Question: How is B related to E?
दी गई जानकारी को ध्यानपूर्वक पढ़ें और प्रश्न में उल्लिखित व्यक्तियों के बीच सही संबंध पहचानें।
A, B का भाई है।
C, A की माता है।
D, C की पुत्री है।
E, D का पिता है।
प्रश्न: B, E से किस प्रकार संबंधित है?

son

बेटा

Wife

पत्नी

Cannot be determined

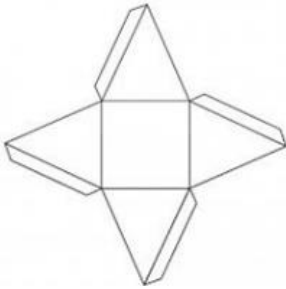
तय नहीं किया जा सकता

Daughter

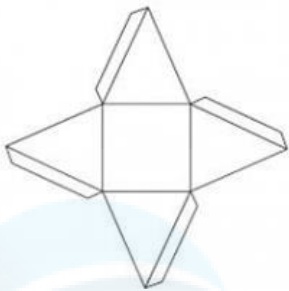
बेटी

Q.No: 36

Which of the following 3D shapes can be formed by folding the given 2D net?



दिए गए 2डी जाल को मोड़कर निम्नलिखित में से कौन सी 3डी आकृति बनाई जा सकती है?



- Cube
- घन
- Cuboid
- घनाभ
- Pyramid
- पिरामिड
- Tetrahedron
- चतुष्फलक
- Not Answered

Q.No: 37

If ♥ : 2 :: ♣ : ?
अगर ♥ : 2 :: ♣ : ?

4

4

2

2

5

5

1

1

Q.No: 38

In each of the following questions, two numbers are given which follow a certain logical or arithmetic relationship. Identify the same pattern and apply it to find the missing number in the second pair. Choose the correct option from the given alternatives.
19384 : 31506 :: 28493 : ?
निम्नलिखित प्रत्येक प्रश्न में दो संख्याएँ दी गई हैं जो एक निश्चित तार्किक या अंकगणितीय संबंध का पालन करती हैं। समान पैटर्न की पहचान कीजिए और दूसरे जोड़े में लुप्त संख्या ज्ञात करने के लिए इसका प्रयोग कीजिए। दिए गए विकल्पों में से सही विकल्प चुनिए।
19384 : 31506 :: 28493 : ?

40615

40615

41706

41706

40617

40617

39615

39615

Q.No: 39

What should come at the place of question mark?

Question Figure:

Answer Figure:

A

B

C

D

प्रश्न चिह्न के स्थान पर क्या आना चाहिए?

प्रश्न आकृति:

उत्तर आकृति:

A

B

C

D

C

C

A

A

B

B

Q.No: 40

Criteria to be selected as Assistant Manager (as on 01-04-2023):

MBA degree with at least 65% marks.

Age between 26 to 32 years.

Must have minimum 2 years of management experience.

Must be fluent in English and Hindi.

Special Clause:

If candidate meets all but the language requirement, refer to Language Proficiency Panel.

Case:

Tarun is 30 years old, has MBA with 70% marks, and 3 years experience. He is fluent in English but not confident in Hindi.

What should be done in Tarun's case?

सहायक प्रबंधक के रूप में चयन के मानदंड (01-04-2023 तक):

कम से कम 65% अंकों के साथ एमबीए की डिग्री।

आयु 26 से 32 वर्ष के बीच।

प्रबंधन का न्यूनतम 2 वर्ष का अनुभव होना आवश्यक है।

अंग्रेजी और हिंदी में धाराप्रवाह होना आवश्यक है।

विशेष खंड:

यदि उम्मीदवार भाषा की आवश्यकता को छोड़कर सभी आवश्यकताओं को पूरा करता है, तो भाषा दक्षता पैनल देखें।

मामला:

तरुण 30 वर्ष का है, उसके पास 70% अंकों के साथ एमबीए है, और 3 वर्ष का अनुभव है। वह अंग्रेजी में तो धाराप्रवाह है, लेकिन हिंदी में आत्मविश्वास नहीं रखता।

तरुण के मामले में क्या किया जाना चाहिए?

Select the candidate

उम्मीदवार का चयन करें

Reject the candidate
उम्मीदवार को अस्वीकार करें
Refer to Language Proficiency Panel
भाषा प्रवीणता पैनल देखें
Refer to Managing Director
प्रबंध निदेशक से संपर्क करें

Q.No: 41	What will be the alphabetical position index of the word DOG if all letters of the English alphabet are arranged in reverse order? अगर अंग्रेजी वर्णमाला के सभी अक्षरों को उल्टे क्रम में व्यवस्थित किया जाए तो शब्द DOG का वर्णमाला स्थान सूचकांक क्या होगा?
23, 13, 21	
23, 13, 21	
22, 12, 20	
22, 12, 20	
22, 13, 21	
22, 13, 21	
23, 12, 20	
23, 12, 20	

Q.No: 42	In each of the following questions, a number series is given. In each series, only one number is incorrect. Identify the wrong number. 2, 4, 8, 16, 34, 64 निम्नलिखित प्रत्येक प्रश्न में एक संख्या श्रृंखला दी गई है। प्रत्येक श्रृंखला में केवल एक संख्या गलत है। गलत संख्या पहचानिए। 2, 4, 8, 16, 34, 64
34	
34	
64	
64	
4	
4	
8	
8	

Q.No: 43

Which of the following follows the correct pattern of the question figure?

Question figure:

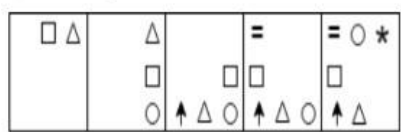
□ △	△	=	= ○ *
	□	□ □	□
	○ ↑ △ ○	↑ △ ○	↑ △

Answer figure:

= ○ *	○ * △	□ = ○	= ○ *
□ △	= #	↑ *	□ △
↑ #	□ ↑	# △	↑ #
1	2	3	4

निम्नलिखित में से कौन सा प्रश्न आकृति के सही स्वरूप का अनुसरण करता है?

Question figure:



Answer figure:



3

3

1

1

2

2

4

4

Not Answered

Q.No: 44 If 3 + 2 = 15, 4 + 3 = 28, what is 5 + 4?

अगर 3 + 2 = 15, 4 + 3 = 28, तो 5 + 4 क्या है?

45

45

36

36

32

32

40

40

Q.No: 45 Choose the missing figure in the complex pattern.

● □ ● □ ● □ ● ?

जटिल पैटर्न में लुप्त आकृति चुनें।

● □ ● □ ● □ ● ?

□

□

●

●

●

●

□

□

Q.No: 46 Ramesh is taller than Suresh but shorter than Naresh. Naresh is taller than Umesh. Who is tallest?

रमेश, सुरेश से लंबा है लेकिन नरेश से छोटा है। नरेश, उमेश से लंबा है। सबसे लंबा कौन है?

Naresh

नरेश

Ramesh

रमेश
Suresh
सुरेश
Umesh
उमेश

Q.No: 47

In each of the following questions, a specific relationship is given between two words. Identify the word that shares a similar semantic relationship with the given pair. Choose the most appropriate option from the four choices given below.
Metaphor : Language :: Algorithm : ?
निम्नलिखित प्रत्येक प्रश्न में दो शब्दों के बीच एक विशिष्ट संबंध दिया गया है। उस शब्द की पहचान कीजिए जो दिए गए युग्म के साथ समान अर्थ संबंध साझा करता है। नीचे दिए गए चार विकल्पों में से सबसे उपयुक्त विकल्प चुनिए।
रूपक : भाषा :: एल्गोरिथ्म : ?

Instruction

अनुदेश

Process

प्रक्रिया

Mathematics

अंक शास्त्र

Computer

कंप्यूटर

Q.No: 48

What will come at the place of question mark?

A

B

C

?

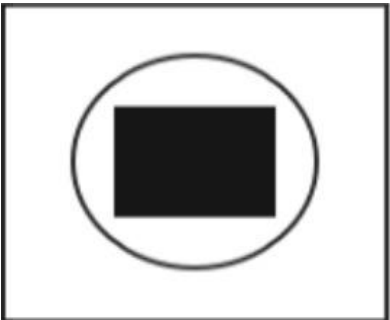
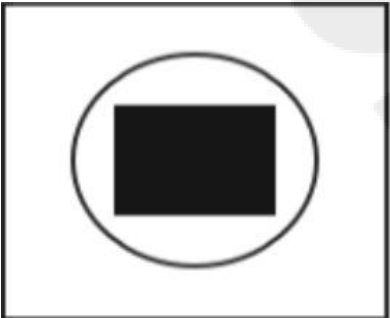
प्रश्न चिन्ह के स्थान पर क्या आएगा?

A

B

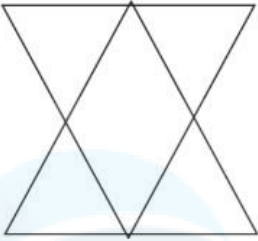
C

?

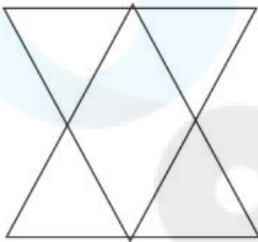


Q.No: 49

How many straight lines are there in the star figure?



तारे की आकृति में कितनी सीधी रेखाएँ हैं?



20

20

15

15

5

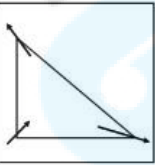
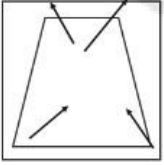
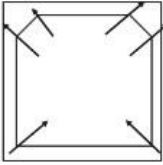
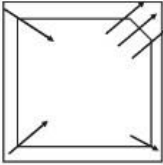
5

9

9

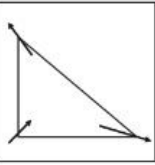
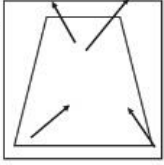
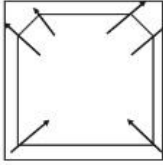
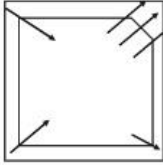
Q.No: 50

Choose the figure that is different from the rest in terms of the observed sequence or rule.



A B C D

वह आकृति चुनें जो प्रेक्षित अनुक्रम या नियम के संदर्भ में बाकी से भिन्न है।



A B C D

B

B

A

A

C

C

D

D

Q.No: 51

Which of the following statements best links a current conservation initiative for the Great Indian Bustard with its geographical location?

निम्नलिखित में से कौन सा कथन ग्रेट इंडियन बस्टर्ड के लिए वर्तमान संरक्षण पहल को उसके भौगोलिक स्थान के साथ सबसे अच्छी तरह से जोड़ता है?

National Avian Research Centre in Maharashtra conducted habitat simulation for GIB.

महाराष्ट्र स्थित राष्ट्रीय एवियन अनुसंधान केंद्र ने जीआईबी के लिए आवास सिमुलेशन का आयोजन किया।

Kalyan Sanctuary in Karnataka now houses the largest wild GIB population.

कर्नाटक के कल्याण अभयारण्य में अब सबसे बड़ी जंगली जीआईबी आबादी है।

India's first successful artificial insemination of GIB took place in the National Breeding Centre in Jaisalmer, Rajasthan.

भारत में जीआईबी का पहला सफल कृत्रिम गर्भाधान राजस्थान के जैसलमेर स्थित राष्ट्रीय प्रजनन केंद्र में हुआ।

A GIB conservation breeding centre was set up in Kutch, Gujarat for desert climate adaptation.

रेगिस्तानी जलवायु अनुकूलन के लिए गुजरात के कच्छ में एक जीआईबी संरक्षण प्रजनन केंद्र स्थापित किया गया।

Q.No: 52

Match the column:

Column A (Conductor Type)	Column B (Mobile Charge Carriers)
A. Metal	1. Positive and negative ions
B. Ionised gas	2. Electrons and positively charged ions
C. Electrolyte	3.Electrons

स्तंभ का मिलान करें:

कॉलम A (कंडक्टर प्रकार)	कॉलम B (मोबाइल चार्ज वाहक)
A. धातु	1. सकारात्मक और नकारात्मक आयन
B. आयनित गैस	2. इलेक्ट्रॉन और धनावेशित आयन
C. इलेक्ट्रोलाइट	3. इलेक्ट्रॉनों

A-3, B-2, C-1

A-3, B-2, C-1

A-2, B-3, C-1

A-2, B-3, C-1

A-1, B-2, C-3

A-1, B-2, C-3

A-3, B-1, C-2

A-3, B-1, C-2

Q.No: 53

Which of the following statements are correct?

(1) Birth rate measures the number of children born per 1000 people annually.

(2) Pull factors include opportunities that attract people to new regions.

(3) Death rate is always higher than birth rate.

(4) Push factors can include civil unrest and lack of jobs.

निम्नलिखित में से कौन सा कथन सही है?

(1) जन्म दर प्रति वर्ष प्रति 1000 लोगों पर पैदा होने वाले बच्चों की संख्या को मापती है।

(2) पुल कारकों में वे अवसर शामिल हैं जो लोगों को नए क्षेत्रों की ओर आकर्षित करते हैं।

(3) मृत्यु दर हमेशा जन्म दर से अधिक होती है।

(4) पुश कारकों में नागरिक अशांति और नौकरियों की कमी शामिल हो सकती है।

All of the above

ऊपर के सभी

2 and 3 only

केवल 2 और 3

1, 2, and 4 only

केवल 1, 2, और 4

1 and 3 only

केवल 1 और 3

Q.No: 54	What does the term 'capital formation' refer to in macroeconomics? समष्टि अर्थशास्त्र में 'पूंजी निर्माण' (Capital Formation) किस प्रक्रिया को दर्शाता है?
Growth in production capacity through investment निवेश के माध्यम से उत्पादन क्षमता में वृद्धि	
Decrease in foreign direct investment प्रत्यक्ष विदेशी निवेश में कमी	
Expansion of consumer credit उपभोक्ता ऋण का विस्तार	
Increase in financial savings वित्तीय बचत में वृद्धि	

Q.No: 55	Which of the following North-Eastern states has areas governed under the Sixth Schedule? निम्नलिखित में से किस पूर्वोत्तर राज्य के क्षेत्र छठी अनुसूची के अंतर्गत शासित हैं?
Tripura त्रिपुरा	
Manipur मणिपुर	
Nagaland नगालैंड	
Arunachal Pradesh अरुणाचल प्रदेश	

Q.No: 56	What is the punishment for abetment of an offense under the POCSO Act? पॉक्सो अधिनियम के अंतर्गत किसी अपराध में उकसावे (abetment) के लिए क्या दंड निर्धारित है?
Same punishment as the offense अपराध के लिए निर्धारित समान दंड	
Half the punishment prescribed for the offense मूल अपराध के लिए निर्धारित दंड का आधा	
No punishment कोई दंड नहीं	
Community service सामुदायिक सेवा	

Q.No: 57	Which layer of the Earth's atmosphere is primarily responsible for absorbing ultraviolet radiation from the Sun? पृथ्वी के वायुमंडल की कौन सी परत मुख्य रूप से सूर्य से पराबैंगनी विकिरण को अवशोषित करने के लिए जिम्मेदार है?
Thermosphere थर्मोस्फीयर	
Stratosphere स्ट्रेटोस्फीयर	
Mesosphere मीसोस्फीयर	
Troposphere क्षोभ मंडल	

Q.No: 58	In the context of Mughal administration, who were referred to as Shaikhzadas or Hindustanis? मुगल प्रशासन के संदर्भ में किसे शेखजादा या हिंदुस्तानी कहा जाता था?
----------	---

Central Asian nobles of Turkic origin serving the Mughals
मुगलों की सेवा करने वाले तुर्क मूल के मध्य एशियाई कुलीन
Rajput converts elevated to noble ranks for loyalty
राजपूतों को उनकी वफादारी के लिए महान पद पर पदोन्नत किया गया
Persian-trained officers recruited from Safavid Iran
सफ़वीद ईरान से भर्ती किए गए फ़ारसी-प्रशिक्षित अधिकारी
Indigenous Muslims who held administrative posts under Mughal rule
मुगल शासन के दौरान प्रशासनिक पदों पर आसीन रहे मूलनिवासी मुसलमान

Q.No: 59	Which of the following bodies has the power to create new All-India Services common to both the Union and the States? निम्नलिखित में से किस निकाय को संघ और राज्यों दोनों के लिए सामान्य नई अखिल भारतीय सेवाएं बनाने की शक्ति है?
The President of India by issuing an executive order. भारत के राष्ट्रपति ने एक कार्यकारी आदेश जारी करके यह निर्णय लिया है।	
The Union Cabinet by a simple majority. केन्द्रीय मंत्रिमंडल द्वारा साधारण बहुमत से पारित किया गया।	
The Prime Minister with the consent of all Chief Ministers. प्रधानमंत्री सभी मुख्यमंत्रियों की सहमति से।	
The Parliament, provided the Rajya Sabha passes a resolution by a special majority. संसद, बशर्ते कि राज्य सभा विशेष बहुमत से प्रस्ताव पारित करे।	
Not Answered	

Q.No: 60	Arrange the following RBI Governors in the correct chronological order of their tenure (from earliest to latest): 1. Dr. Y. V. Reddy 2. Dr. D. Subbarao 3. Dr. Urjit R. Patel 4. Shri Sanjay Malhotra निम्नलिखित आरबीआई गवर्नरों को उनके कार्यकाल के सही कालानुक्रमिक क्रम में व्यवस्थित करें (प्रारंभिक से अंतिम तक): 1. डॉ. वाई. वी. रेड्डी 2. डॉ. डी. सुब्बाराव 3. डॉ. उर्जित आर. पटेल 4. श्री संजय मल्होत्रा
1, 3, 2, 4	
1, 3, 2, 4	
2, 3, 1, 4	
2, 3, 1, 4	
2, 1, 3, 4	
2, 1, 3, 4	
1, 2, 3, 4	
1, 2, 3, 4	

Q.No: 61	Which is the largest island of India in terms of area? क्षेत्रफल की दृष्टि से भारत का सबसे बड़ा द्वीप कौन-सा है?
Rameswaram रामेश्वरम	
Great Nicobar Island महानिकोबार द्वीप	
Sriharikota श्रीहरिकोटा	
Majuli माजुली द्वीप	

Q.No: 62	Where was the National Shooting Championship 2024 held? राष्ट्रीय निशानेबाजी चैम्पियनशिप 2024 कहाँ आयोजित की गई?
----------	---

Bhubaneswar, Odisha
भुवनेश्वर, ओडिशा
Mumbai, Maharashtra
मुंबई, महाराष्ट्र
Panaji, Goa
पणजी, गोवा
Bhopal, Madhya Pradesh
भोपाल, मध्य प्रदेश

Q.No: 63	Which of the following is correctly matched with their leadership role in the Constituent Assembly (During the making of the Indian constitution)? निम्नलिखित में से कौन संविधान सभा (भारतीय संविधान के निर्माण के दौरान) में उनकी नेतृत्वकारी भूमिका से सही सुमेलित है?
G.V. Mavalankar – Chairman of the Committee on the Functions of the Constituent Assembly	
जी.वी. मावलंकर - संविधान सभा के कार्यों संबंधी समिति के अध्यक्ष	
Dr. B.R. Ambedkar – Head of the Committee on the Functions of the Assembly	
डॉ. बी.आर. अम्बेडकर - विधानसभा के कार्यों संबंधी समिति के प्रमुख	
N. Gopalaswami Ayyangar – Chairman of the Order of Business Committee	
एन. गोपालस्वामी अयंगर - ऑर्डर ऑफ बिजनेस कमेटी के अध्यक्ष	
K.M. Munshi – Leader of the Committee on Fundamental Rights	
के.एम. मुंशी - मौलिक अधिकारों पर समिति के नेता	

Q.No: 64	Which of the following correctly pairs a monument with its architectural style? निम्नलिखित में से कौन-सा स्मारक एवं उसकी वास्तुशैली का युग्म सही है?
Khajuraho Temples – French	
खजुराहो मंदिर - फ्रांसीसी प्रभाव	
Qutub Minar – Indo-Islamic	
कुतुब मीनार - भारत-इस्लामी शैली	
India Gate – Rajput	
इंडिया गेट - राजपूत शैली	
Lotus Temple – Mughal	
लोटस टेम्पल - मुगल शैली	

Q.No: 65	How did Second Generation Reforms impact foreign investment in India? द्वितीय पीढ़ी के सुधारों का भारत में प्रत्यक्ष विदेशी निवेश (FDI) पर क्या प्रभाव पड़ा?
It reduced foreign investment	
इससे विदेशी निवेश में गिरावट आई	
It had no impact on foreign investment	
विदेशी निवेश पर कोई प्रभाव नहीं पड़ा	
It restricted foreign companies from entering India	
विदेशी कंपनियों के भारत में प्रवेश पर प्रतिबंध	
It increased foreign investment by improving the investment climate	
निवेश वातावरण में सुधार कर विदेशी निवेश को बढ़ावा देना	

Q.No: 66 Match the Following

Column A – Literary Work	Column B – Type
A. Naukar Ki Kameez	i. Poetry collection
B. Lagbhag Jai Hind	ii. Novel
C. Peed Par Kamra	iii. Short story collection
D. Woh Aadmi Chala Gaya	iv. Poem

निम्नलिखित का मिलान करें

कॉलम A – साहित्यिक कार्य	स्तंभ B – प्रकार
A. नौकर की कमीज	i. कविता संग्रह
B. लगभाग जय हिंद	ii. उपन्यास
C. पीड पर कमरा	iii. लघु कहानी संग्रह
D. वो आदमी चला गया	iv. कविता

A-iii, B-ii, C-i, D-iv

A-iii, B-ii, C-i, D-iv

A-ii, B-i, C-iii, D-iv

A-ii, B-i, C-iii, D-iv

. A-i, B-ii, C-iv, D-iii

. A-i, B-ii, C-iv, D-iii

A-ii, B-iii, C-i, D-iv

A-ii, B-iii, C-i, D-iv

Not Answered

Q.No: 67 What is the radius of the centre circle in a football field?

एक फुटबॉल मैदान में केन्द्रीय वृत्त की त्रिज्या क्या है?

5.5 m

5.5 मीटर

10.5 m

10.5 मीटर

11 m

11 मीटर

9.15 m

9.15 मीटर

Not Answered

Q.No: 68 According to the Constitution of India, what is the quorum required to constitute a meeting of either House of Parliament?

भारतीय संविधान के अनुसार, संसद के किसी भी सदन की बैठक के लिए आवश्यक कोरम क्या है?

One-third of the total number of members of the House.

सदन के कुल सदस्यों की संख्या का एक तिहाई।

Fifty members in the Lok Sabha and twenty-five members in the Rajya Sabha.

लोक सभा में पचास सदस्य और राज्य सभा में पच्चीस सदस्य।

One-tenth of the total number of members of the House.

सदन के कुल सदस्यों की संख्या का दसवां हिस्सा।

One-fourth of the total number of members of the House.

सदन के कुल सदस्यों की संख्या का एक-चौथाई

Q.No: 69	Which Indian Union Territory has the most Scheduled Castes? किस भारतीय केंद्र शासित प्रदेश में अनुसूचित जातियाँ सबसे ज्यादा हैं?
Delhi	
दिल्ली	
Chandigarh	
चंडीगढ़	
Ladakh	
लद्दाख	
Lakshadweep	
लक्षद्वीप	

Q.No: 70	Which of the following best describes the main objective of the Indo-French Megha-Tropiques satellite mission? निम्नलिखित में से कौन सा कथन भारत-फ्रांसीसी मेघा-ट्रॉपिक्स उपग्रह मिशन के मुख्य उद्देश्य का सबसे अच्छा वर्णन करता है?
Understanding convective systems and the water cycle in tropical regions उष्णकटिबंधीय क्षेत्रों में संवहन प्रणालियों और जल चक्र को समझना	
Studying polar ice melt and its impact on global sea levels ध्रुवीय बर्फ के पिघलने और वैश्विक समुद्री स्तर पर इसके प्रभाव का अध्ययन	
Mapping mineral resources in the Himalayan region हिमालयी क्षेत्र में खनिज संसाधनों का मानचित्रण	
Monitoring ozone depletion over the equator भूमध्य रेखा पर ओजोन क्षरण की निगरानी	

Q.No: 71	The "Golden Boot" is awarded in which sport? गोल्डन बूट पुरस्कार किस खेल में प्रदान किया जाता है?
Cricket	
क्रिकेट	
Baseball	
बेसबॉल	
Hockey	
हॉकी	
Football	
फुटबॉल	

Q.No: 72	The regulatory framework adopted by India between 1947 and 1990, often referred to as the "License Raj," aimed to direct economic activity. While it had certain intended benefits, what was a significant unintended negative consequence often associated with this system? 1947 और 1990 के बीच भारत द्वारा अपनाए गए विनियामक ढांचे को अक्सर "लाइसेंस राज" के रूप में संदर्भित किया जाता है, जिसका उद्देश्य आर्थिक गतिविधि को निर्देशित करना था। हालाँकि इसके कुछ इच्छित लाभ थे, लेकिन इस प्रणाली से अक्सर जुड़ा एक महत्वपूर्ण अनपेक्षित नकारात्मक परिणाम क्या था?
The creation of barriers to entry for new businesses potentially stifling innovation and leading to inefficiencies. नए व्यवसायों के प्रवेश में बाधाएं उत्पन्न होने से नवाचार में बाधा उत्पन्न हो सकती है तथा अकुशलताएं पैदा हो सकती हैं।	
A significant reduction in corruption and bureaucratic delays in obtaining necessary approvals for economic activities. आर्थिक गतिविधियों के लिए ज़रूरी अनुमोदन प्राप्त करने में भ्रष्टाचार और नौकरशाही देरी में उल्लेखनीय कमी।	
A rapid increase in the quality and global competitiveness of Indian-made goods due to stringent quality control measures. कड़े गुणवत्ता नियंत्रण उपायों के कारण भारतीय निर्मित वस्तुओं की गुणवत्ता और वैश्विक प्रतिस्पर्धात्मकता में तेजी से वृद्धि।	
The fostering of a highly competitive market environment with numerous players in each industry. प्रत्येक उद्योग में अनेक खिलाड़ियों के साथ अत्यधिक प्रतिस्पर्धी बाजार वातावरण को बढ़ावा देना।	

Q.No: 73

Given below are the two columns. Column A consists of Events or terms and column B consist of correct descriptions. Match the column A with correct description in Column B

Column A	Column B
A. Anglo-Russian rivalry	1. Opened Sindh's rivers and roads to British trade.
B. Subsidiary Treaty 1839	2. Forced on the Amirs of Sindh before annexation.
C. Sir Charles Napier	3.Had commercial value; attracted British interest.
D. River Sindh	4.Led military campaign to annex Sindh; called it a "rascality."
E. Treaty of 1832	5. Led Britain to expand influence in Afghanistan and Persia

नीचे दो कॉलम दिए गए हैं। कॉलम A में घटनाएँ या शब्द हैं और कॉलम B में सही विवरण हैं। कॉलम A का मिलान कॉलम B में दिए गए सही विवरण से करें

स्तंभ A	स्तंभ B
A. एंग्लो-रूसी प्रतिद्वंद्विता	1. सिंध की नदियों और सड़कों को ब्रिटिश व्यापार के लिए खोल दिया।
B. सहायक संधि 1839	2. विलय से पहले सिंध के अमीरों पर थोपा गया।
C. सर चार्ल्स नेपियर	3.इसका वाणिज्यिक महत्व था; इसने ब्रिटिश रुचि को आकर्षित किया।
D. सिंध नदी	4.सिंध को अपने अधीन करने के लिए सैन्य अभियान का नेतृत्व किया; इसे "दुष्टता" कहा।
E. 1832 की संधि	5. ब्रिटेन को अफगानिस्तान और फारस में अपना प्रभाव बढ़ाने में मदद की

A-5, B-2, C-4, D-3, E-1

A-5, B-2, C-4, D-3, E-1

A-1, B-5, C-2, D-4, E-3

A-1, B-5, C-2, D-4, E-3

A-2, B-4, C-3, D-1, E-5

A-2, B-4, C-3, D-1, E-5

A-4, B-1, C-5, D-2, E-3

A-4, B-1, C-5, D-2, E-3

Q.No: 74

Which classical dance form originated in Andhra Pradesh and incorporates both singing and dancing?
कौन-सा शास्त्रीय नृत्य आंध्र प्रदेश से उत्पन्न हुआ है और इसमें गायन एवं नृत्य दोनों सम्मिलित होते हैं?

Manipuri

मणिपुरी

Kathakali

कथकली

Mohiniyattam

मोहिनीयाट्टम

Kuchipudi

कुचिपुडी

Q.No: 75

Ganesh Chaturthi, celebrated widely in Maharashtra, is associated with:
गणेश चतुर्थी, जो विशेष रूप से महाराष्ट्र में व्यापक रूप से मनाई जाती है, किससे संबंधित है?

The descent of Ganga

गंगा का पृथ्वी पर अवतरण

The marriage of Shiva and Parvati
भगवान शिव और पार्वती का विवाह
The birth of Lord Ganesha
भगवान गणेश का जन्म
The return of Krishna to Mathura
कृष्ण का मथुरा लौटना

Q.No: 76	The PM-MITRA scheme is focused on which of the following objectives?
	पीएम-मित्र योजना निम्नलिखित में से किस उद्देश्य पर केंद्रित है?
Expanding petroleum retail chains	
पेट्रोलियम खुदरा श्रृंखलाओं का विस्तार	
Enhancing textile exports and setting up large textile parks	
वस्त्र निर्यात को बढ़ावा देना और बड़े वस्त्र पार्कों की स्थापना करना	
Creating rail-based infrastructure hubs	
रेल-आधारित बुनियादी ढांचा केंद्र बनाना	
Providing smart classrooms in rural schools	
ग्रामीण स्कूलों में स्मार्ट कक्षाएँ उपलब्ध कराना	

Q.No: 77	What is one of the major benefits of providing Geographical Indication (GI) tags to local products made by rural artisans?
	ग्रामीण कारीगरों द्वारा बनाए गए स्थानीय उत्पादों को भौगोलिक संकेत (जीआई) टैग प्रदान करने का एक प्रमुख लाभ क्या है?
It increases dependency on imported goods	
इससे आयातित वस्तुओं पर निर्भरता बढ़ जाती है	
It helps preserve traditional knowledge and boosts rural incomes	
इससे पारंपरिक ज्ञान को संरक्षित करने और ग्रामीण आय को बढ़ाने में मदद मिलती है	
It removes the need for skill development in rural areas	
इससे ग्रामीण क्षेत्रों में कौशल विकास की आवश्यकता समाप्त हो जाती है	
It allows unrestricted copying of the product by other regions	
यह अन्य क्षेत्रों द्वारा उत्पाद की अप्रतिबंधित प्रतिलिपि बनाने की अनुमति देता है	

Q.No: 78	Which country withdrew from the NPT in 2003 and later developed nuclear weapons?
	कौन सा देश 2003 में एनपीटी से हट गया और बाद में परमाणु हथियार विकसित कर लिया?
Israel	
इजराइल	
North Korea	
उत्तर कोरिया	
Syria	
सीरिया	
Iran	
ईरान	

Q.No: 79	Name the organization that made the Golden Quadrilateral Project connecting major cities of India feasible?
	भारत के प्रमुख नगरों को आपस में जोड़ने वाली 'स्वर्णिम चतुर्भुज परियोजना' को लागू करने वाली संस्था का नाम क्या है?
National Highways Authority of India (NHA)	
भारतीय राष्ट्रीय राजमार्ग प्राधिकरण (NHA)	
Indian Railways	
भारतीय रेल	
Ministry of Urban Development	
शहरी विकास मंत्रालय	
Border Roads Organization (BRO)	
सीमा सड़क संगठन (बीआरओ)	

Q.No: 80	<p>In the following questions, a statement of Assertion (A) is followed by a statement of Reason (R). Select the correct option from the following: Assertion (A): Rows of circular brick platforms at Harappa were used for religious ceremonies. Reason (R): These platforms were found to contain wheat and barley grains.</p> <p>निम्नलिखित प्रश्नों में, अभिकथन (A) के कथन के बाद कारण (R) का कथन दिया गया है। निम्नलिखित में से सही विकल्प चुनें: अभिकथन (A): हड़प्पा में गोलाकार ईंटों के चबूतरों की पंक्तियों का उपयोग धार्मिक समारोहों के लिए किया जाता था। कारण (R): इन चबूतरों पर गेहूँ और जौ के दाने पाए गए थे।</p> <p>Both A and R are false A और R दोनों असत्य हैं Both A and R are true, and R explains A A और R दोनों सत्य हैं, तथा R, A की व्याख्या करता है Both A and R are true, but R does not explain A A और R दोनों सत्य हैं, लेकिन R, A की व्याख्या नहीं करता है A is false, but R is true A असत्य है, लेकिन R सत्य है</p>
Q.No: 81	<p>The Alaknanda River originates from which of the following? अलकनंदा नदी का उद्गम स्थल निम्नलिखित में से कौन-सा है?</p> <p>Satopanth Glacier सातोपंथ हिमनद Zemu Glacier ज़ेमु हिमनद Milam Glacier मिलम हिमनद Gangotri Glacier गंगोत्री हिमनद</p>
Q.No: 82	<p>Which pair is correctly matched with India's geopolitical interest? कौन सा युग्म भारत के भू-राजनीतिक हित से सही ढंग से मेल खाता है?</p> <p>Ashgabat Agreement – Partnership with BIMSTEC अश्गाबात समझौता - बिमस्टेक के साथ साझेदारी Kaladan Project – Links to Iran कलादान परियोजना - ईरान से लिंक Ladakh Corridor – Access to Africa लद्दाख कॉरिडोर - अफ्रीका तक पहुंच SAGAR Policy – Maritime ties in the Indian Ocean सागर नीति - हिंद महासागर में समुद्री संबंध</p>
Q.No: 83	<p>Which of the following is NOT a direct outcome of using the Happiness Index? निम्नलिखित में से कौन-सा हैप्पीनेस इंडेक्स के उपयोग का प्रत्यक्ष परिणाम नहीं है?</p> <p>Monitoring population growth जनसंख्या वृद्धि की निगरानी Creating education policies शिक्षा नीतियाँ बनाना Improving healthcare services स्वास्थ्य सेवाओं में सुधार Enhancing social services सामाजिक सेवाओं का सुदृढ़ीकरण</p>

Q.No: 84	What significant institutional development emerged from banking reforms after 1991 to regulate financial stability? वित्तीय स्थिरता को विनियमित करने के लिए 1991 के बाद बैंकिंग सुधारों से कौन सा महत्वपूर्ण संस्थागत विकास सामने आया?
Board for Financial Supervision (BFS)	
वित्तीय पर्यवेक्षण बोर्ड (BFS)	
NABARD	
नाबार्ड	
Securities Appellate Tribunal (SAT)	
प्रतिभूति अपीलीय न्यायाधिकरण (SAT)	
MSME Credit Bureau	
एमएसएमई क्रेडिट ब्यूरो	
Not Answered	

Q.No: 85	Match the following Indexes with their respective Publishing Organizations: <table><thead><tr><th>Column A – Index</th><th>Column B – Publishing Organization</th></tr></thead><tbody><tr><td>A. Global Innovation Index</td><td>1. United Nations Development Programme (UNDP)</td></tr><tr><td>B. Global Hunger Index</td><td>2. World Intellectual Property Organization (WIPO)</td></tr><tr><td>C. Global Peace Index</td><td>3. Concern Worldwide and Welthungerhilfe</td></tr><tr><td>D. Human Development Index (HDI)</td><td>4. Institute for Economics and Peace (IEP)</td></tr></tbody></table> निम्नलिखित अनुक्रमितों का उनके संबंधित प्रकाशन संगठनों से मिलान करें: <table><thead><tr><th>स्तंभ A – सूचकांक</th><th>स्तंभ B – प्रकाशन संगठन</th></tr></thead><tbody><tr><td>A. वैश्विक नवाचार सूचकांक</td><td>1. संयुक्त राष्ट्र विकास कार्यक्रम (UNDP)</td></tr><tr><td>B. वैश्विक भूख सूचकांक</td><td>2. विश्व बौद्धिक संपदा संगठन (WIPO)</td></tr><tr><td>C. वैश्विक शांति सूचकांक</td><td>3. कन्सर्न वर्ल्डवाइड और वेल्थहंगरहिल्फे</td></tr><tr><td>D. मानव विकास सूचकांक (HDI)</td><td>4. अर्थशास्त्र और शांति संस्थान (IEP)</td></tr></tbody></table>	Column A – Index	Column B – Publishing Organization	A. Global Innovation Index	1. United Nations Development Programme (UNDP)	B. Global Hunger Index	2. World Intellectual Property Organization (WIPO)	C. Global Peace Index	3. Concern Worldwide and Welthungerhilfe	D. Human Development Index (HDI)	4. Institute for Economics and Peace (IEP)	स्तंभ A – सूचकांक	स्तंभ B – प्रकाशन संगठन	A. वैश्विक नवाचार सूचकांक	1. संयुक्त राष्ट्र विकास कार्यक्रम (UNDP)	B. वैश्विक भूख सूचकांक	2. विश्व बौद्धिक संपदा संगठन (WIPO)	C. वैश्विक शांति सूचकांक	3. कन्सर्न वर्ल्डवाइड और वेल्थहंगरहिल्फे	D. मानव विकास सूचकांक (HDI)	4. अर्थशास्त्र और शांति संस्थान (IEP)
Column A – Index	Column B – Publishing Organization																				
A. Global Innovation Index	1. United Nations Development Programme (UNDP)																				
B. Global Hunger Index	2. World Intellectual Property Organization (WIPO)																				
C. Global Peace Index	3. Concern Worldwide and Welthungerhilfe																				
D. Human Development Index (HDI)	4. Institute for Economics and Peace (IEP)																				
स्तंभ A – सूचकांक	स्तंभ B – प्रकाशन संगठन																				
A. वैश्विक नवाचार सूचकांक	1. संयुक्त राष्ट्र विकास कार्यक्रम (UNDP)																				
B. वैश्विक भूख सूचकांक	2. विश्व बौद्धिक संपदा संगठन (WIPO)																				
C. वैश्विक शांति सूचकांक	3. कन्सर्न वर्ल्डवाइड और वेल्थहंगरहिल्फे																				
D. मानव विकास सूचकांक (HDI)	4. अर्थशास्त्र और शांति संस्थान (IEP)																				
A-3, B-2, C-1, D-4																					
A-3, B-2, C-1, D-4																					
A-4, B-2, C-3, D-1																					
A-4, B-2, C-3, D-1																					
A-2, B-1, C-3, D-4																					
A-2, B-1, C-3, D-4																					
A-2, B-3, C-4, D-1																					
A-2, B-3, C-4, D-1																					

Q.No: 86	What is the role of National Parks under the Wildlife Protection Act, 1972? वन्यजीव संरक्षण अधिनियम, 1972 के अंतर्गत राष्ट्रीय उद्यानों की भूमिका क्या है?
To promote tourism पर्यटन को बढ़ावा देने के लिए	
To protect wildlife and their habitats वन्यजीवों एवं उनके प्राकृतिक आवास की सुरक्षा हेतु	
To regulate trade व्यापार को नियंत्रित करने के लिए	

To oversee elections

चुनावों की निगरानी हेतु

Q.No: 87	Which of the following is a unique characteristic of sponges (Phylum Porifera)? निम्नलिखित में से कौन स्पंज (फाइलम पोरिफेरा) की एक अनूठी विशेषता है?
	Water canal system and choanocytes जल नलिका प्रणाली और कोआनोसाइट्स
	Radial symmetry and presence of tentacles रेडियल समरूपता और स्पर्शकों की उपस्थिति
	Jointed appendages and chitinous exoskeleton संयुक्त उपांग और काइटिनस बाह्यकंकाल
	Presence of cnidoblasts for defense रक्षा के लिए निडोब्लास्ट्स की उपस्थिति

Q.No: 88	Who was invited as the chief guest for India's 76th Republic Day celebrations on January 26, 2025? 26 जनवरी, 2025 को भारत के 76वें गणतंत्र दिवस समारोह के लिए मुख्य अतिथि के रूप में किसे आमंत्रित किया गया है?
	Joko Widodo जोको विडोडो
	Ferdinand Marcos Jr. फर्डिनेंड मार्कोस जूनियर.
	Anwar Ibrahim अनवर इब्राहिम
	Prabowo Subianto प्रबोवो सुबियांटो

Q.No: 89	The Industrial Policy Resolution of 1948 aimed at: 1948 के औद्योगिक नीति प्रस्ताव का उद्देश्य था:
	Privatizing industries उद्योगों का निजीकरण
	Developing rural areas ग्रामीण क्षेत्रों का विकास
	Opening up foreign trade विदेशी व्यापार को खोलना
	Promoting public sector सार्वजनिक क्षेत्र को बढ़ावा देना

Q.No: 90	Two resistors named R1 and R2, are connected in parallel. If $R1 < R2$, what can be inferred about the current flowing through them, given the same potential difference across both? R1 और R2 नामक दो प्रतिरोधक समांतर क्रम में जुड़े हुए हैं। यदि $R1 < R2$ है, तो दोनों के बीच समान विभवांतर होने पर, उनमें प्रवाहित धारा के बारे में क्या अनुमान लगाया जा सकता है?
	Current through R1 is less than through R2. R1 से प्रवाहित धारा, R2 से प्रवाहित धारा से कम है।
	Current through R1 is equal to current through R2. R1 से प्रवाहित धारा, R2 से प्रवाहित धारा के बराबर है।
	Current through R1 is greater than through R2. R1 से प्रवाहित धारा, R2 से प्रवाहित धारा से अधिक है।
	The current ratio depends on the supply voltage. धारा अनुपात आपूर्ति वोल्टेज पर निर्भर करता है।
	Not Answered

Q.No: 91	What was the objective of the Swachh Bharat Abhiyan? स्वच्छ भारत अभियान का उद्देश्य क्या था?
Achieving universal sanitation coverage	
सार्वभौमिक स्वच्छता कवरेज प्राप्त करना	
Promoting digital payments	
डिजिटल भुगतान को बढ़ावा देना	
Providing rural housing	
ग्रामीण आवास उपलब्ध कराना	
Creating jobs in the rural sector	
ग्रामीण क्षेत्र में रोजगार सृजन	

Q.No: 92	Who among the following is related to the Parakram Diwas? निम्नलिखित में से कौन पराक्रम दिवस से संबंधित है?
Subhash Bose	
सुभाष बोस	
Azad	
आजाद	
Mahatma Gandhi	
महात्मा गांधी	
Bhagat Singh	
भगत सिंह	

Q.No: 93	If "a soldier fires on a mob by the order of his superior officer, in conformity with the law". According to the Bharatiya Nyaya Sanhita, 2023, has he committed an offence? यदि "कोई सैनिक अपने वरिष्ठ अधिकारी के आदेश पर, कानून के अनुरूप, भीड़ पर गोली चलाता है" तो भारतीय न्याय संहिता, 2023 के अनुसार, क्या उसने कोई अपराध किया है?
Yes, because he could have disobeyed	
हाँ, क्योंकि वह अवज्ञा कर सकता था	
Yes, because violence is punishable	
हाँ, क्योंकि हिंसा दंडनीय है	
No, because he followed public orders	
नहीं, क्योंकि उन्होंने सार्वजनिक आदेशों का पालन किया	
No, because he believed in good faith that he was bound by law	
नहीं, क्योंकि वह सद्भावनापूर्वक मानता था कि वह कानून से बंधा हुआ है	

Q.No: 94	High honey yield and gentle behaviour in bees for commercial beekeeping can be achieved through one of the following methods: व्यावसायिक मधुमक्खी पालन के लिए उच्च शहद उत्पादन और मधुमक्खियों में सौम्य व्यवहार निम्नलिखित विधियों में से किसी एक के माध्यम से प्राप्त किया जा सकता है:
Using wild bee species with aggressive defence traits	
आक्रामक रक्षा गुणों वाली जंगली मधुमक्खी प्रजातियों का उपयोग करना	
Frequently relocating hives to prevent bees from settling	
मधुमक्खियों को बसने से रोकने के लिए छत्तों को बार-बार स्थानांतरित करना	
Avoiding bee farms and relying solely on natural honey collection	
मधुमक्खी फार्मों से बचना और केवल प्राकृतिक शहद संग्रह पर निर्भर रहना	
Introducing Italian bees that collect more honey and remain in hives longer	
इतालवी मधुमक्खियों का परिचय जो अधिक शहद एकत्र करती हैं और लंबे समय तक छत्तों में रहती हैं	

Q.No: 95	Who headed the Credentials Committee in the Constituent Assembly? संविधान सभा में क्रेडेंशियल्स समिति का नेतृत्व किसने किया था?
Alladi Krishnaswamy Aiyar	
अल्लादी कृष्णस्वामी अय्यर	

T.T. Krishnamachari
टी.टी. कृष्णमाचारी
Jawaharlal Nehru
जवाहरलाल नेहरू
K.M. Munshi
के.एम. मुंशी
Not Answered

Q.No: 96	Which of the following is a prominent form of Hindustani classical vocal music? हिंदुस्तानी शास्त्रीय गायन की प्रमुख विधाओं में से एक कौन-सी है?
Kathak	
कथक	
Dhrupad	
ध्रुपद	
Bharatnatyam	
भरतनाट्यम	
Kuchipudi	
कुचिपुड़ी	

Q.No: 97	Which of the following is NOT a primary factor affecting the variation of insolation on Earth? निम्नलिखित में से कौन सा पृथ्वी पर सूर्यातप की भिन्नता को प्रभावित करने वाला प्राथमिक कारक नहीं है?
Presence of water bodies in an area	
किसी क्षेत्र में जल निकायों की उपस्थिति	
Rotation of the Earth on its axis	
पृथ्वी का अपनी धुरी पर घूमना	
Transparency of the atmosphere	
वातावरण की पारदर्शिता	
Angle of inclination of the Sun's rays	
सूर्य की किरणों का झुकाव कोण	

Q.No: 98	According to Keynesian theory, during recession, what should the government ideally do? कीन्सियन सिद्धांत के अनुसार, मंदी के दौरान सरकार को आदर्श रूप से क्या करना चाहिए?
Increase interest rates	
ब्याज दरें बढ़ाएँ	
Increase spending and cut taxes	
खर्च बढ़ाएँ और करों में कटौती करें	
Promote imports	
आयात को बढ़ावा देना	
Reduce spending	
खर्च कम करें	

Q.No: 99	SpaDeX mission is related to _____. स्पेडेक्स मिशन _____ से संबंधित है।
Artificial intelligence	
कृत्रिम होशियारी	
Space docking	
अंतरिक्ष डॉकिंग	
Space farming	
अंतरिक्ष खेती	
Planetary geology	
ग्रहीय भूविज्ञान	

Q.No: 100	<p>Which of the following systems can be affected by a solar storm?</p> <p>1. GPS signal accuracy</p> <p>2. Power transmission systems</p> <p>3. Submarine communication cables</p> <p>4. Pipeline infrastructure</p> <p>निम्नलिखित में से कौन सी प्रणाली सौर तूफान से प्रभावित हो सकती है?</p> <p>1. जीपीएस सिग्नल सटीकता</p> <p>2. पावर ट्रांसमिशन सिस्टम</p> <p>3. पनडुब्बी संचार केबल</p> <p>4. पाइपलाइन अवसंरचना</p>
2 and 3 only	
केवल 2 और 3	
1 and 2 only	
केवल 1 और 2	
3 and 4 only	
केवल 3 और 4	
1,2,3, and 4 all of these	
1,2,3, और 4 ये सभी	

PART - C (English Language and Comprehension).

Q.No: 101	<p>Find the antonym of 'Impute'.</p>
Support	
Energetic	
Cheerful	
Lively	

Q.No: 102	<p>Read the following passage and answer the questions based on the passage:</p> <p>Universal immunization campaigns have eradicated or controlled fatal conditions such as smallpox and polio. Mass immunization relies on cold-chain availability: vaccines have to be stored at precise temperatures from manufacturing through inoculation. Solar-powered refrigerators and insulated containers are lifelines for remote locations. Door-to-door interactions by community health workers educate households regarding dosage routines and myths. Vaccine hesitancy fueled by misinformation is also a major obstacle to herd immunity. Campaigns of public education—capitalizing on radio, social media, and school initiatives—seek to revive public faith in science. Preserving accessibility and communication in an open nature is crucial in order to secure public health.</p> <p>What does “cold-chain logistics” refer to in the passage?</p>
Transporting vaccines under controlled temperatures	
Selling vaccines in cold climates	
Developing new vaccine formulas	
Distributing medicines door-to-door	

Q.No: 103	<p>Read the following passage and answer the questions based on the passage:</p> <p>Universal immunization campaigns have eradicated or controlled fatal conditions such as smallpox and polio. Mass immunization relies on cold-chain availability: vaccines have to be stored at precise temperatures from manufacturing through inoculation. Solar-powered refrigerators and insulated containers are lifelines for remote locations. Door-to-door interactions by community health workers educate households regarding dosage routines and myths. Vaccine hesitancy fueled by misinformation is also a major obstacle to herd immunity. Campaigns of public education—capitalizing on radio, social media, and school initiatives—seek to revive public faith in science. Preserving accessibility and communication in an open nature is crucial in order to secure public health.</p> <p>According to the passage, which method helps maintain vaccine potency in remote areas?</p>
-----------	---

Air-conditioned cars
Solar-powered refrigerators
Vaccine-heated containers
Underground storage

Q.No: 104	<p>Read the following passage and answer the questions based on the passage:</p> <p>Universal immunization campaigns have eradicated or controlled fatal conditions such as smallpox and polio. Mass immunization relies on cold-chain availability: vaccines have to be stored at precise temperatures from manufacturing through inoculation. Solar-powered refrigerators and insulated containers are lifelines for remote locations. Door-to-door interactions by community health workers educate households regarding dosage routines and myths. Vaccine hesitancy fueled by misinformation is also a major obstacle to herd immunity. Campaigns of public education—capitalizing on radio, social media, and school initiatives—seek to revive public faith in science. Preserving accessibility and communication in an open nature is crucial in order to secure public health.</p> <p>Vaccine hesitancy is primarily caused by:</p>
Lack of refrigerators	
Misinformation	
Cold-chain failures`	
Overproduction	

Q.No: 105	<p>Read the following passage and answer the questions based on the passage:</p> <p>Universal immunization campaigns have eradicated or controlled fatal conditions such as smallpox and polio. Mass immunization relies on cold-chain availability: vaccines have to be stored at precise temperatures from manufacturing through inoculation. Solar-powered refrigerators and insulated containers are lifelines for remote locations. Door-to-door interactions by community health workers educate households regarding dosage routines and myths. Vaccine hesitancy fueled by misinformation is also a major obstacle to herd immunity. Campaigns of public education—capitalizing on radio, social media, and school initiatives—seek to revive public faith in science. Preserving accessibility and communication in an open nature is crucial in order to secure public health.</p> <p>Which strategy is NOT mentioned as part of public-education initiatives?</p>
Radio broadcasts	
Social-media influencers	
School programs	
Financial incentives	

Q.No: 106	<p>Read the following passage and answer the questions based on the passage:</p> <p>Universal immunization campaigns have eradicated or controlled fatal conditions such as smallpox and polio. Mass immunization relies on cold-chain availability: vaccines have to be stored at precise temperatures from manufacturing through inoculation. Solar-powered refrigerators and insulated containers are lifelines for remote locations. Door-to-door interactions by community health workers educate households regarding dosage routines and myths. Vaccine hesitancy fueled by misinformation is also a major obstacle to herd immunity. Campaigns of public education—capitalizing on radio, social media, and school initiatives—seek to revive public faith in science. Preserving accessibility and communication in an open nature is crucial in order to secure public health.</p> <p>The passage suggests that to protect public health, it is essential to:</p>
Eliminate door-to-door visits	
Halt solar-powered technology	
Ensure equitable access and clear communication	
Focus solely on urban areas	

Q.No: 107	<p>Read the following passage and answer the questions based on the passage:</p> <p>Microfinance institutions (MFIs) have become crucial agents for advancing financial inclusion in rural areas. Through extending small loans and savings accounts to people who don't have access to conventional banks, MFIs empower entrepreneurs—most often women—to initiate or scale up microenterprises. In most villages, these loans support poultry farming, handloom weaving, or tiny retailing outlets. MFIs go beyond credit by regularly offering financial education training, teaching borrowers to cope with cash flows and interest charges. Critics warn, however, that excessive interest rates and repayment pressure can result in over-indebtedness. To avoid such risks, some MFIs limit interest rates and spread repayment terms. Research indicates that when complemented by market linkages—such as guaranteed buyers for fruits and vegetables—microfinance can trigger sustainable economic growth and poverty reduction.</p> <p>The primary function of microfinance institutions, according to the passage, is to:</p>
	Charge high interest rates to rural borrowers
	Provide large corporate loans
	Offer financial services to those excluded from traditional banking systems
	Regulate national monetary policy

Q.No: 108	<p>Read the following passage and answer the questions based on the passage:</p> <p>Microfinance institutions (MFIs) have become crucial agents for advancing financial inclusion in rural areas. Through extending small loans and savings accounts to people who don't have access to conventional banks, MFIs empower entrepreneurs—most often women—to initiate or scale up microenterprises. In most villages, these loans support poultry farming, handloom weaving, or tiny retailing outlets. MFIs go beyond credit by regularly offering financial education training, teaching borrowers to cope with cash flows and interest charges. Critics warn, however, that excessive interest rates and repayment pressure can result in over-indebtedness. To avoid such risks, some MFIs limit interest rates and spread repayment terms. Research indicates that when complemented by market linkages—such as guaranteed buyers for fruits and vegetables—microfinance can trigger sustainable economic growth and poverty reduction.</p> <p>In the context of the above passage, “microenterprises” most nearly means:</p>
	Multinational corporations
	Small-scale businesses
	Government agencies
	Family-owned farms

Q.No: 109	<p>Read the following passage and answer the questions based on the passage:</p> <p>Microfinance institutions (MFIs) have become crucial agents for advancing financial inclusion in rural areas. Through extending small loans and savings accounts to people who don't have access to conventional banks, MFIs empower entrepreneurs—most often women—to initiate or scale up microenterprises. In most villages, these loans support poultry farming, handloom weaving, or tiny retailing outlets. MFIs go beyond credit by regularly offering financial education training, teaching borrowers to cope with cash flows and interest charges. Critics warn, however, that excessive interest rates and repayment pressure can result in over-indebtedness. To avoid such risks, some MFIs limit interest rates and spread repayment terms. Research indicates that when complemented by market linkages—such as guaranteed buyers for fruits and vegetables—microfinance can trigger sustainable economic growth and poverty reduction.</p> <p>Which benefit of MFIs is mentioned besides lending money?</p>
	Granting land titles
	Financial literacy training
	Tax exemptions
	Import-export facilitation

Q.No: 110	<p>Read the following passage and answer the questions based on the passage:</p> <p>Microfinance institutions (MFIs) have become crucial agents for advancing financial inclusion in rural areas. Through extending small loans and savings accounts to people who don't have access to conventional banks, MFIs empower entrepreneurs—most often women—to initiate or scale up microenterprises. In most villages, these loans support poultry farming, handloom weaving, or tiny retailing outlets. MFIs go beyond credit by regularly offering financial education training, teaching borrowers to cope with cash flows and interest charges. Critics warn, however, that excessive interest rates and repayment pressure can result in over-indebtedness. To avoid such risks, some MFIs limit interest rates and spread repayment terms. Research indicates that when complemented by market linkages—such as guaranteed buyers for fruits and vegetables—microfinance can trigger sustainable economic growth and poverty reduction.</p> <p>What is a key criticism of microfinance highlighted in the passage?</p>
	<p>It fails to reach women borrowers.</p> <p>It offers only savings accounts.</p> <p>High interest and repayment pressure can cause debt.</p> <p>It mandates market linkages.</p>

Q.No: 111	<p>Read the following passage and answer the questions based on the passage:</p> <p>Microfinance institutions (MFIs) have become crucial agents for advancing financial inclusion in rural areas. Through extending small loans and savings accounts to people who don't have access to conventional banks, MFIs empower entrepreneurs—most often women—to initiate or scale up microenterprises. In most villages, these loans support poultry farming, handloom weaving, or tiny retailing outlets. MFIs go beyond credit by regularly offering financial education training, teaching borrowers to cope with cash flows and interest charges. Critics warn, however, that excessive interest rates and repayment pressure can result in over-indebtedness. To avoid such risks, some MFIs limit interest rates and spread repayment terms. Research indicates that when complemented by market linkages—such as guaranteed buyers for fruits and vegetables—microfinance can trigger sustainable economic growth and poverty reduction.</p> <p>According to the author, sustainable impact occurs when microfinance is combined with:</p>
	<p>High interest rates</p> <p>Market linkages</p> <p>Shorter loan tenures</p> <p>Government bailouts</p>

Q.No: 112	<p>In the following passage, some words have been omitted. Read the passage carefully and choose the most appropriate option from the given alternatives to fill in each blank. Mark your answer for each question.</p> <p>For many young professionals, choosing a career is no longer just about earning a salary—it's about finding meaning in what they do. Some are drawn to high-paying jobs, while others feel more (1)_____ working in fields that align with their personal values. This growing divide between passion and paycheck has led to tough decisions for many. While financial stability is important, ignoring one's true interests can lead to long-term (2)_____. Experts suggest that a balanced approach is possible. One can pursue a stable job and still nurture their passions through part-time work, volunteering, or creative outlets. However, such a path requires careful (3)_____. Making impulsive career shifts without planning can lead to regret. It's important to evaluate not just income, but also growth, purpose, and job (4)_____. After all, the goal is not just to survive—but to build a life that is both secure and (5)_____.</p> <p>(1)</p>
	<p>challenged</p> <p>comfortable</p> <p>proud</p> <p>fulfilled</p>

Q.No: 113

In the following passage, some words have been omitted. Read the passage carefully and choose the most appropriate option from the given alternatives to fill in each blank. Mark your answer for each question.

For many young professionals, choosing a career is no longer just about earning a salary—it's about finding meaning in what they do. Some are drawn to high-paying jobs, while others feel more (1)_____ working in fields that align with their personal values. This growing divide between passion and paycheck has led to tough decisions for many. While financial stability is important, ignoring one's true interests can lead to long-term (2)_____. Experts suggest that a balanced approach is possible. One can pursue a stable job and still nurture their passions through part-time work, volunteering, or creative outlets. However, such a path requires careful (3)_____. Making impulsive career shifts without planning can lead to regret. It's important to evaluate not just income, but also growth, purpose, and job (4)_____. After all, the goal is not just to survive—but to build a life that is both secure and (5)_____.

(2)

success

burnout

freedom

boredom

Q.No: 114

In the following passage, some words have been omitted. Read the passage carefully and choose the most appropriate option from the given alternatives to fill in each blank. Mark your answer for each question.

For many young professionals, choosing a career is no longer just about earning a salary—it's about finding meaning in what they do. Some are drawn to high-paying jobs, while others feel more (1)_____ working in fields that align with their personal values. This growing divide between passion and paycheck has led to tough decisions for many. While financial stability is important, ignoring one's true interests can lead to long-term (2)_____. Experts suggest that a balanced approach is possible. One can pursue a stable job and still nurture their passions through part-time work, volunteering, or creative outlets. However, such a path requires careful (3)_____. Making impulsive career shifts without planning can lead to regret. It's important to evaluate not just income, but also growth, purpose, and job (4)_____. After all, the goal is not just to survive—but to build a life that is both secure and (5)_____.

(3)

luck

hesitation

planning

risk

Q.No: 115

In the following passage, some words have been omitted. Read the passage carefully and choose the most appropriate option from the given alternatives to fill in each blank. Mark your answer for each question.

For many young professionals, choosing a career is no longer just about earning a salary—it's about finding meaning in what they do. Some are drawn to high-paying jobs, while others feel more (1)_____ working in fields that align with their personal values. This growing divide between passion and paycheck has led to tough decisions for many. While financial stability is important, ignoring one's true interests can lead to long-term (2)_____. Experts suggest that a balanced approach is possible. One can pursue a stable job and still nurture their passions through part-time work, volunteering, or creative outlets. However, such a path requires careful (3)_____. Making impulsive career shifts without planning can lead to regret. It's important to evaluate not just income, but also growth, purpose, and job (4)_____. After all, the goal is not just to survive—but to build a life that is both secure and (5)_____.

(4)

comfort

loyalty

stability

attitude

Q.No: 116	<p>In the following passage, some words have been omitted. Read the passage carefully and choose the most appropriate option from the given alternatives to fill in each blank. Mark your answer for each question.</p> <p>For many young professionals, choosing a career is no longer just about earning a salary—it's about finding meaning in what they do. Some are drawn to high-paying jobs, while others feel more (1)_____ working in fields that align with their personal values. This growing divide between passion and paycheck has led to tough decisions for many. While financial stability is important, ignoring one's true interests can lead to long-term (2)_____. Experts suggest that a balanced approach is possible. One can pursue a stable job and still nurture their passions through part-time work, volunteering, or creative outlets. However, such a path requires careful (3)_____. Making impulsive career shifts without planning can lead to regret. It's important to evaluate not just income, but also growth, purpose, and job (4)_____. After all, the goal is not just to survive—but to build a life that is both secure and (5)_____.</p> <p>(5)</p>
	wealthy
	creative
	rewarding
	routine

Q.No: 117	<p>In the following question, the first and the last parts of the sentence/passage are numbered 1 and 6. The rest of the sentence/passage is split into four parts — P, Q, R, and S. These four parts are not given in their proper order. Read the sentence/passage and find the most logical order of the parts between 1 and 6.</p> <p>The Earth's climate has changed over centuries. P: But current warming is caused by human actions. Q: Historically, it changed due to natural causes. R: Burning fossil fuels increases greenhouse gases. S: Deforestation worsens the problem. 6. This calls for urgent action.</p>
	QPRS
	QPSR
	SQRP
	PRSQ

Q.No: 118	<p>Identify the part containing a grammatical or structural error:</p> <p>Neither Ramesh nor his friends is willing to join.</p>
	s willing to join
	No error
	nor his friends
	Neither Ramesh

Q.No: 119	<p>Select the correct passive form of the given sentence.</p> <p>"They serve food to the guests."</p>
	Food is served to the guests by them.
	Food was served to the guests.
	Food is being served by them.
	Food has served by them.

Q.No: 120	<p>Choose the antonym of 'meticulous':</p>
	Negligent
	Thorough
	Precise

Careful

Q.No: 121 Choose the correct direct speech form of the following sentence.

The interviewer asked me if I could drive a car.

The interviewer said, "Will you drive a car?"

The interviewer said, "Can you drive a car?"

The interviewer said, "You can drive a car."

The interviewer said, "Shall I drive a car?"

Q.No: 122 In the following question, the first and the last parts of the sentence/passage are numbered 1 and 6. The rest of the sentence/passage is split into four parts — P, Q, R, and S. These four parts are not given in their proper order. Read the sentence/passage and find the most logical order of the parts between 1 and 6.

Exercise keeps the body fit and active. P: It also boosts mental health. Q: Regular workouts reduce stress levels. R: Walking, cycling, and yoga are easy options. S: Physical activity strengthens the heart and muscles. 6. So, exercise should be part of our routine.

SPRQ

QRSP

SQPR

PRQS

Q.No: 123 Choose the antonym of 'imitate':

Replicate

Copy

Innovate

Echo

Q.No: 124 Select the synonym of **Deteriorate**.

Grow

Worsen

Revive

Improve

Q.No: 125 Select the synonym of **Abstruse**.

Difficult

Obvious

Simple

Clear

Q.No: 126 Find the misspelt word.

influential

Magnanimous

Magnanimos

intelligent

Q.No: 127 Find the incorrect part of the sentence:
He could not cope up with the pressure.

cope up with

the pressure

No error

He could not

Q.No: 128 Choose the option that completes the sentence using the correct spelling.
After 35 years of service, Mr. Das finally retired and began receiving his _____ benefits every month.

superanution

superanuuation

superannuation

superanuualtion

Q.No: 129 Select the correct synonym for 'Abate'.

Moderate

Increase

Evil

Honest

Q.No: 130 Select the option that expresses the given sentence in Direct Speech.
She said that she could have passed the exam.

She said, "I would have passed the exam."

She said, "I could have passed the exam."

She said, "I might have passed the exam."

She said, "I should have passed the exam."

Q.No: 131 Select the most appropriate homonym.
He was **charged** with theft.

Energized

Filled

Ordered

Accused

Q.No: 132	Select the most appropriate option to fill in the blank. She adhered strictly ____ the code of conduct.
for	
by	
to	
at	

Q.No: 133	Select the most appropriate option to improve the bold part of the sentence. He is a honest man.
the honest	
an honest	
one honest	
honest	

Q.No: 134	What is the one word for "A person who is talkative"?
Introvert	
Garrulous	
Reticent	
Taciturn	

Q.No: 135	Select the correct passive form of the given sentence. "They can be delivering the goods tomorrow."
The goods can be being delivered tomorrow.	
The goods shall be delivering tomorrow.	
The goods can deliver tomorrow.	
The goods can be delivered tomorrow.	

Q.No: 136	Select the correct active form. "A decision will have been taken by the committee."
The committee will take a decision.	
The committee will have taken a decision.	
The committee took a decision.	
The committee has taken a decision.	

Q.No: 137	Select the most appropriate option to improve the bold part of the sentence. He came here with a view to meet his old friend.
to meet with	
for meeting	
in view to meet	
with a view to meeting	

Q.No: 138	Select the most appropriate option to improve the bold part of the sentence. The manager discussed on the issue in detail.
discussed the issue	
discussed about the issue	
explained the issue	
talked over the issue	

Q.No: 139	Rearrange the parts of this sentence: (A) their demands (B) the workers (C) went on strike (D) after the management rejected
DBAC	
DACB	
BDAC	
BACD	
Not Answered	

Q.No: 140	In the following question, the first and the last parts of the sentence/passage are numbered 1 and 6. The rest of the sentence/passage is split into four parts — P, Q, R, and S. These four parts are not given in their proper order. Read the sentence/passage and find the most logical order of the parts between 1 and 6. Riya enjoys learning different languages. P: She attends French classes. Q: Her Spanish is improving. R: She knows some German. S: She uses an app to practice daily. 6. She wants to be a polyglot.
QRSP	
QRSP	
QPRS	
RPQS	

Q.No: 141	Select the correct passive form of the given sentence. "The doctor prescribed the medicine."
The medicine is prescribed.	
The medicine has been prescribed.	
The medicine had been prescribing.	
The medicine was prescribed by the doctor.	

Q.No: 142	Choose the correct option to complete the sentence. The volunteers will _____ the neighbourhood to gather support for the new policy.
canvas	
canopies	
canvass	
cannabis	

Q.No: 143	Select the most appropriate option to fill in the blank. We prefer tea ____ coffee.
or	

for
on
with

Q.No: 144	Select the most appropriate option to fill in the blank. My house is ___ the bank and the post office.
among	
across	
beside	
between	

Q.No: 145	Choose the word that is not spelled correctly.
Exagerate	
Leisure	
Colleague	
Maintenance	

Q.No: 146	Select the most appropriate option to improve the bold part of the sentence. Each of the students have a book.
has	
had	
gets	
is having	

Q.No: 147	Choose the correct direct speech form of the following sentence. Robinson said that he would be planting trees along the bank of the river.
Robinson said, "I am planting trees along the bank of the river."	
Robinson said, "I shall plant trees along the bank of the river."	
Robinson said, "I shall be planting trees along the bank of the river."	
Robinson said, "I shall have to plant trees along the bank of the river."	

Q.No: 148	Arrange the sentence parts: (A) opened (B) suddenly (C) the door (D) he
DABC	
CBAD	
DCAB	
DACE	

Q.No: 149	Identify the error in the sentence. This route is most safer than the highway.
-----------	---

safer
highway
most
route

Q.No: 150	Find the incorrect part of the sentence: The police has arrested the culprit.
has arrested	
The police	
the culprit	
No error	

Q.No: 151	Choose the one which can be substituted for the given sentence. A medicine that induces sleep
Sedative	
Narcotic	
Analgesic	
Hypnotic	

Q.No: 152	What does the idiom 'in black and white' mean?
Officially in writing	
In verbal form	
In secret	
Unclear terms	

Q.No: 153	Change the voice of the following sentence. It is going to be constructed by them within a few weeks.
They are going to construct it with a few weeks.	
They are going to construct it within a few weeks.	
They are going to construct something within a few weeks.	
They are going to constructed it within a few weeks.	

Q.No: 154	Select the correct active form of the given sentence. "The hungry dog was gently fed by the owner."
The owner gently fed up the hungry dog.	
The owner fed the hungry dog.	
The owner gently fed the hungry dog.	
The owner gently feeding the hungry dog.	

Q.No: 155	Choose the correct active voice form of the sentence: "The editorial is written by Mamatha."
Mamatha has writing the editorial.	
Mamatha writes the editorial.	
Mamatha is writes the editorial.	
Mamatha writing the editorial.	

Q.No: 156	Select the correct active form. "The truth must be told by you."
You must have told the truth.	
You ought to tell the truth.	
You must be telling the truth.	
You must tell the truth.	

Q.No: 157	Select the most appropriate homonym. The company refused to back the project.
Finish	
Support	
Leave	
Pack	

Q.No: 158	Select the most appropriate option to fill in the blank. She is married ____ a businessman.
at	
with	
for	
to	

Q.No: 159	Select the most appropriate option to fill in the blank. I saw a man ____ was wearing a black coat.
which	
whom	
who	
whose	

Q.No: 160	Choose the part of the sentence that contains an error: She gave me a good advice.
good	
She gave me	
a good advice	
No error	

Q.No: 161	<p>In the following question, the first and the last parts of the sentence/passage are numbered 1 and 6. The rest of the sentence/passage is split into four parts — P, Q, R, and S. These four parts are not given in their proper order. Read the sentence/passage and find the most logical order of the parts between 1 and 6.</p> <p>Artificial Intelligence is reshaping industries. P: It also improves customer service through automation. Q: In healthcare, it helps in quick diagnosis. R: AI systems reduce human error in complex calculations. S: From manufacturing to medicine, its impact is visible. 6. Its future role will only expand.</p>
SQRP	
RSQP	
QPRS	
QRPS	

Q.No: 162	<p>Rearrange the parts of this sentence: (A) despite poor rainfall (B) the farmers (C) managed to harvest (D) a good crop</p>
BDAC	
BADC	
BACD	
CBAD	

Q.No: 163	<p>Select the option that expresses the given sentence in Direct to Indirect Speech. He said, "Let me do it myself."</p>
He asked to do it himself.	
He suggested doing it himself.	
He requested that he do it himself.	
He asked to be allowed to do it himself.	

Q.No: 164	<p>Choose the correct sequence to form a meaningful sentence: (A) the guests (B) arrived (C) at the party (D) early</p>
BACD	
ABDC	
BADC	
CBAD	

Q.No: 165	<p>Select the option that expresses the given sentence in Direct to Indirect Speech. Rita said, "I am happy today."</p>
Rita said that she is happy today.	
Rita said that she was happy that day.	
Rita said that she had been happy that day.	
Rita said that she was happy today.	

Q.No: 166	<p>Select the option that expresses the given sentence in Direct to Indirect Speech. He said, "I may go there."</p>

He said that he would go there.
He said that he goes there.
He said that he might go there.
He said that he may go there.

Q.No: 167	Select the most appropriate homonym. The diver reached the sea bed .
Mattress	
Bottom	
Rest	
Chair	

Q.No: 168	In the following question, the first and the last parts of the sentence/passage are numbered 1 and 6. The rest of the sentence/passage is split into four parts — P, Q, R, and S. These four parts are not given in their proper order. Read the sentence/passage and find the most logical order of the parts between 1 and 6. The invention of the telescope changed astronomy. P: Scientists could observe distant galaxies. Q: They discovered stars not visible to the naked eye. R: Earlier, knowledge was limited to nearby celestial bodies. S: The new tool opened a whole new universe. 6. Astronomy became a precise science.
SRPQ	
PQRS	
RPSQ	
RSQP	

Q.No: 169	Choose the one which can be substituted for the given sentence. One who studies the evolution of mankind
Archaeologist	
Sociologist	
Anthropologist	
Philologist	

Q.No: 170	In the following question, the first and the last parts of the sentence/passage are numbered 1 and 6. The rest of the sentence/passage is split into four parts — P, Q, R, and S. These four parts are not given in their proper order. Read the sentence/passage and find the most logical order of the parts between 1 and 6. The invention of the wheel changed the world. P: Transport became easier. Q: Machines could now be built. R: Travel became faster. S: Roads improved quickly. 6. It was a great invention.
PRQS	
PRSQ	
PQRS	
PSRQ	

Q.No: 171	Select the most appropriate option to fill in the blank. Please switch ___ the lights.
down	

up
over
off

Q.No: 172	Choose the one which can be substituted for the given sentence. A place where wild animals are kept
Abattoir	
Aquarium	
Zoo	
Aviary	

Q.No: 173	Select the most appropriate option to fill in the blank. The witness was reluctant to part ____ vital information.
by	
of	
with	
from	

Q.No: 174	Transform the following sentence into active voice. The tree was felled by the farmer.
The farmer has felled the tree.	
The farmer fell from the tree.	
The farmer fell the tree.	
The farmer felled the tree.	

Q.No: 175	What does the idiom 'To have the last laugh' mean?
<div>Succeed eventually</div>	
Fail hopelessly	
Be mocked	
Stay indifferent	

Q.No: 176	Arrange the sentence parts: (A) invited (B) to the event (C) many guests (D) were
DABC	
DCAB	
CDAB	
DACB	

Q.No: 177 In the following question, the first and the last parts of the sentence/passage are numbered 1 and 6. The rest of the sentence/passage is split into four parts — P, Q, R, and S. These four parts are not given in their proper order. Read the sentence/passage and find the most logical order of the parts between 1 and 6.

Recycling helps in environmental protection. P: It reduces the amount of waste in landfills. Q: Recycling paper saves trees and water. R: It also cuts down pollution caused by burning waste. S: But awareness among people is still low. 6. Public campaigns can improve participation.

- QPRS
- PQRS
- QRSP
- PRSQ

Q.No: 178 Arrange the sentence parts:
(A) after the meeting (B) the team members (C) went (D) to a restaurant

- ABCD
- BADC
- BCAD
- BACD

Q.No: 179 Select the correct passive form of the given sentence.
"We may have misunderstood the instructions."

- The instructions may be misunderstood.
- The instructions are being misunderstood.
- The instructions may have misunderstood.
- The instructions may have been misunderstood.

Q.No: 180 Select the synonym of **Loathe**.

- Accept
- Like
- Hate
- Love

Q.No: 181 Select the misspelt word from the list.

- Mason
- Manoeuvre
- Reservoir
- Camouflage

Q.No: 182 What does the idiom 'Give someone a cold shoulder' mean?

- Treat warmly
- Praise someone
- Ignore someone

Invite for dinner

Q.No: 183 Arrange the sentence parts:
(A) were injured (B) many passengers (C) in the accident (D) yesterday

BCAD

BCDA

BACD

BADC

Q.No: 184 Select the option that expresses the given sentence in Direct to Indirect Speech.
She said, "How wonderful the view is!"

She said how wonderful the view is.

She exclaimed that the view was very wonderful.

She said that the view is wonderful.

She exclaimed that the view was wonderful.

Q.No: 185 Choose the antonym of 'enhance':

Increase

Enlarge

Diminish

Augment

Q.No: 186 Select the most appropriate option to improve the bold part of the sentence.
The higher you go, the **cooler it get**.

cooler it gets

cooler it getting

more cooler it gets

coolest it becomes

Q.No: 187 Choose the correct meaning of idiom:
'Show a clean pair of heels'

Run away

Imitate one

Be precise and careful

Spread quickly

Q.No: 188 What does the idiom 'To turn over a new leaf' mean?

Start afresh

Repeat mistakes

Turn pages

Stay unchanged

Q.No: 189	Select the option that expresses the given sentence in Direct Speech. She told me that I should have been more careful.
She said, "You should have been more careful."	
She said, "You should be more careful."	
She said, "You would have been more careful."	
She said, "You must have been more careful."	

Q.No: 190	Select the option that expresses the given sentence in Direct to Indirect Speech. She said, "My parents are visiting next week."
She said that her parents are visiting next week.	
She said that her parents will visit next week.	
She said that my parents were visiting the next week.	
She said that her parents were visiting the following week.	

Q.No: 191	Choose the correct meaning of the idiom: 'Tooth and nail'
Secretly and silently	
Without any tools	
In a confused state	
With full strength and determination	

Q.No: 192	Identify the misspelt word:
Acknowledge	
Connoissuer	
Acquire	
Absence	

Q.No: 193	Choose the part of the sentence that contains an error: Neither the teacher nor the students was present.
No error	
was present	
Neither the teacher	
nor the students	

Q.No: 194	Choose the correct direct speech form of the following sentence. The reporter reported that five people had been drowned in a boat accident.
The reporter said, "Five people were drowned in a boat accident."	

The reporter said, "Five people are drowned in a boat accident."

The reporter said, "Five people were drowning in a boat accident."

The reporter said, "Five people drowned in a road accident."

Q.No: 195 Rearrange the parts of this sentence:
(A) to protect endangered species (B) wildlife sanctuaries (C) have been established (D) across the country

BADC

BACD

BCAD

CBAD

Q.No: 196 Choose the correctly spelt word:

Occasional

Occational

Occassional

Occasionale

Q.No: 197 Select the most appropriate option to improve the bold part of the sentence.
She prevented me **to go** there.

for going

against going

going to

from going

Q.No: 198 Select the most appropriate option to fill in the blank.
The officials connived ____ the illegal activities.

with

for

on

at

Q.No: 199 Choose the correct direct speech form of the following sentence.

They requested to close the door if he was feeling cold.

He said, "Please closed the door if you are feeling cold."

He said, "Please close the door if you are feeling cold."

He said, "Please close the door if you is feeling cold."

He said, "Please close the door if feel cold."

Q.No: 200 Select the most appropriate option to improve the bold part of the sentence.
Scarcely had I left when it **was starting** to rain.

had started

was begun

did start

started

