



View Your Responses

Click Here Grievance About Question

Click Here View Grievance Questions

Admin loggedin.[ Logout ]

Exam Name

:

Steno Grade C and D

Test Date

:

07 Aug 2025

Test Time

:

05:30 PM

Centre

:

DLNEW219\_1\_R K DIGITAL COMPUTER- CENTRE 2\_100128

Correct Option selected

Wrong Option selected

Correct Option

Not Answered

PART - A (General Intelligence & Reasoning)

Q.No: 1

Select the possible cubes that can be formed by folding the given sheet.

A

B

C

D

दिए गए शीट को मोड़कर बनाए जा सकने वाले संभावित घनों का चयन करें।

A

B

C

D

A and C only

केवल A और C

A, B,D only

केवल A, B,D

B and C Only

केवल B और C

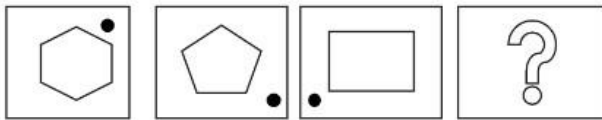
A only

केवल A

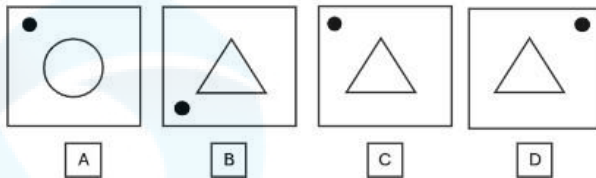
Q.No: 2

What will be the next figure?

Question figure:

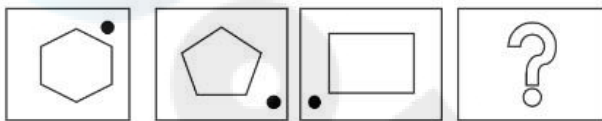


**Answer figure:**

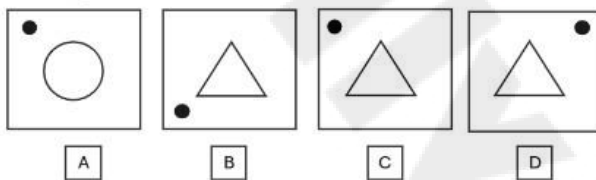


### अगली आकृति क्या होगी?

**प्रश्न आकृति:**



**उत्तर आकृति:**



A

A

B

B



D

D

Q.No: 3

Apple, Banana, Carrot, Mango – which is the odd one?

सेब, केला, गाजर, आम - इनमें से कौन सा विषम है?

Mango
-------

आम

Banana

केला

Carrot

गाजर

Apple

सेब

Q.No: 4

Read each scenario carefully, evaluate all options, identify the action that best navigates the various competing factors and values.

You're enjoying a casual evening gathering at a close friend's home. During the evening, your friend decides to put on a movie that you immediately recognize as a pirated copy they downloaded illegally. Your friend excitedly asks you to help connect their laptop to the TV, and everyone else at the gathering seems oblivious or unconcerned. You personally disapprove of piracy but don't want to create an awkward situation or offend your friend.

प्रत्येक परिदृश्य को ध्यान से पढ़ें, सभी विकल्पों का मूल्यांकन करें, और उस कार्य की पहचान करें जो विभिन्न प्रतिस्पर्धी कारकों और मूल्यों को सबसे अच्छी तरह से संतुलित करता है।

आप अपने एक करीबी दोस्त के घर पर एक आरामदायक शाम की सभा का आनंद ले रहे हैं। शाम के दौरान, आपका दोस्त एक फिल्म चलाने का फैसला करता है जिसे आप तुरंत एक पायरेटेड कॉपी के रूप में पहचान लेते हैं जिसे उन्होंने अवैध रूप से डाउनलोड किया है। आपका दोस्त उत्साहपूर्वक आपको अपने लैपटॉप को टीवी से जोड़ने में मदद करने के लिए कहता है, और सभा में बाकी सभी लोग अनजान या बेपरवाह लगते हैं। आप व्यक्तिगत रूप से पायरेसी का विरोध करते हैं लेकिन एक अजीब स्थिति पैदा नहीं करना चाहते या अपने दोस्त को नाराज नहीं करना चाहते।

Publicly refuse to help and explain loudly to your friend and the group why piracy is wrong.

सार्वजनिक रूप से मदद करने से इनकार करें और अपने दोस्त और समूह को जोर से समझाएं कि पायरेसी गलत क्यों है।

Watch the movie, but later, report your friend to copyright authorities.

फिल्म देखें, लेकिन बाद में, अपने दोस्त की कॉपीराइट अधिकारियों को रिपोर्ट करें।

Discreetly excuse yourself from participating in the setup or watching the movie, perhaps by saying you need to make a call or step outside for a moment.

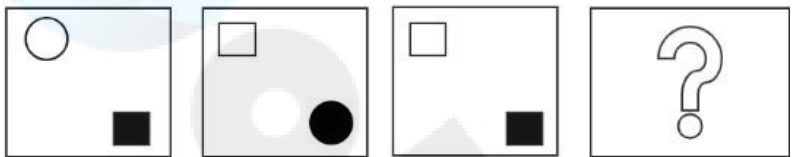
विवेकपूर्ण तरीके से सेटअप में भाग लेने या फिल्म देखने से खुद को अलग कर लें, शायद यह कहकर कि आपको एक कॉल करनी है या कुछ देर के लिए बाहर जाना है।

Go along with it and help connect the laptop, avoiding any discomfort or confrontation.

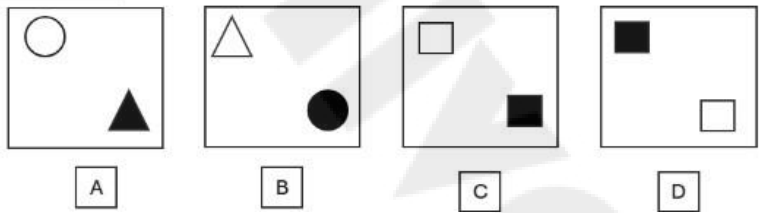
इसके साथ चलें और लैपटॉप कनेक्ट करने में मदद करें, किसी भी असहजता या टकराव से बचें।

Q.No: 5 What should come at the place of question figure?

Question figure:

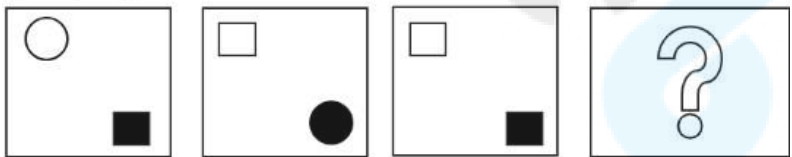


Answer figure:

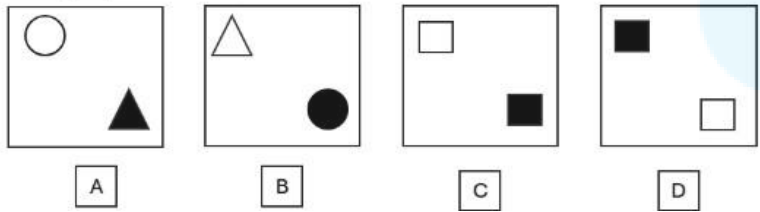


प्रश्न आकृति के स्थान पर क्या आना चाहिए?

प्रश्न आकृति:



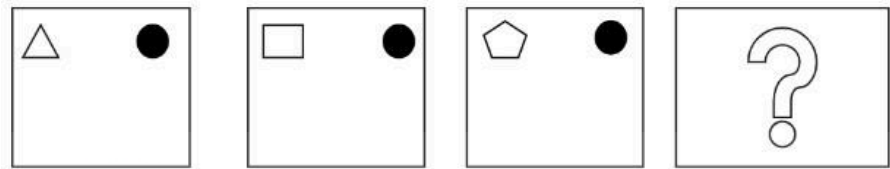
उत्तर आकृति:



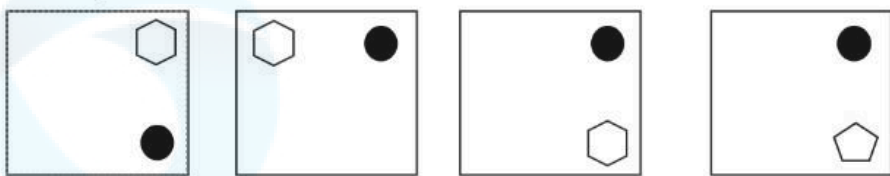
- D
- D
- 
- B
- B
- A
- A

Q.No: 6 What should be at the place of question mark?

Question Figure:



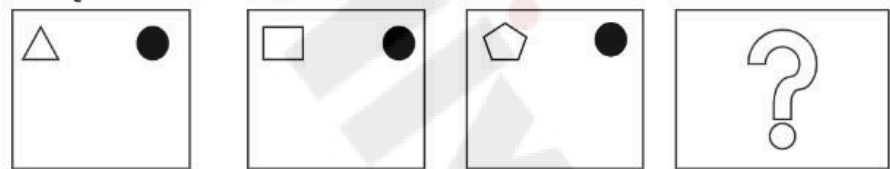
Answer Figure:



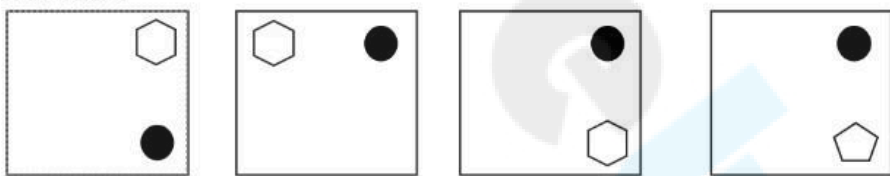
A B C D

प्रश्न चिह्न के स्थान पर क्या होना चाहिए?

प्रश्न आकृति:



उत्तर आकृति:



A B C D

Q.No: 7 What will be the next number in the series: 19, 37, 73, 145, ?

श्रृंखला में अगला अंक क्या होगा: 19, 37, 73, 145, ?

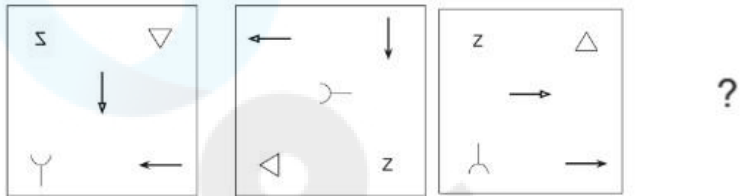
Q.No: 8 Find the next number in the series: 2, 6, 12, 20, 30, ?



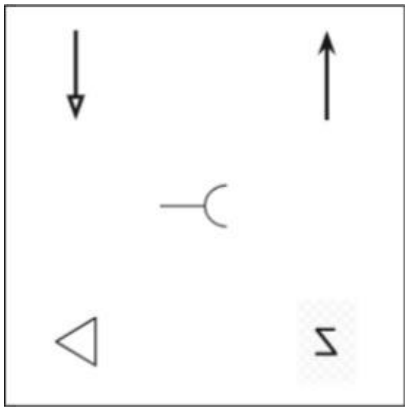
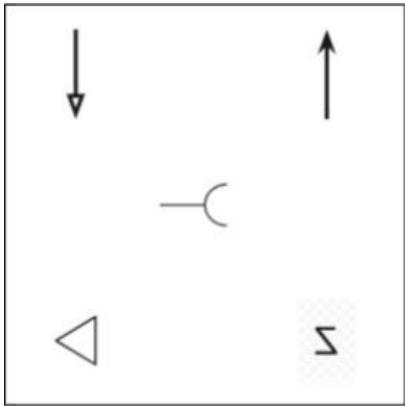
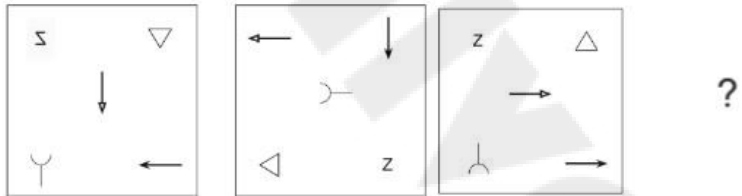
श्रृंखला में अगली संख्या ज्ञात कीजिए: 2, 6, 12, 20, 30, ?

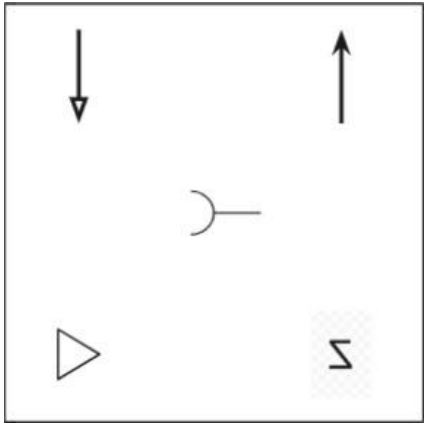
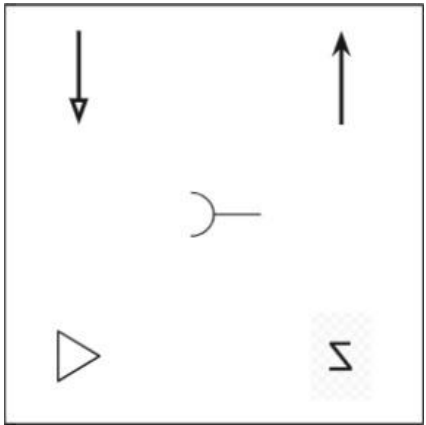
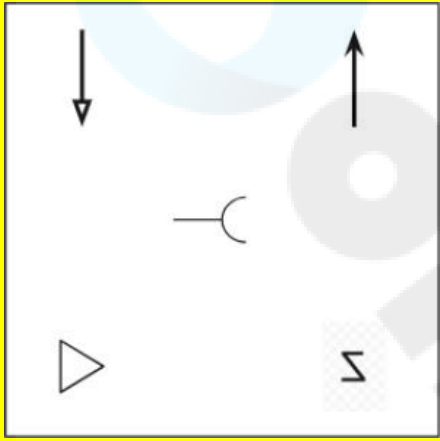
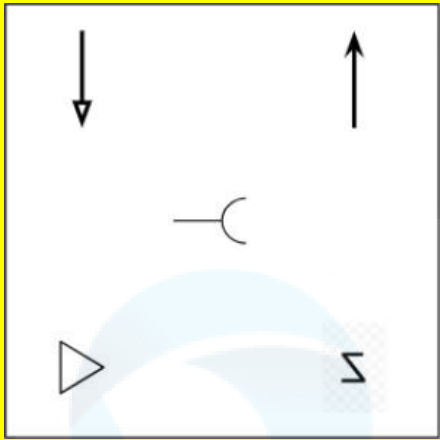
40  
40  
44  
44  
42  
42  
36  
36

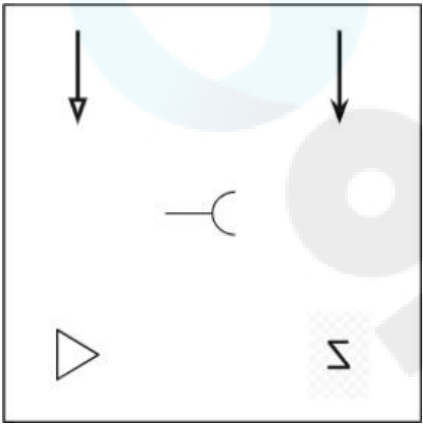
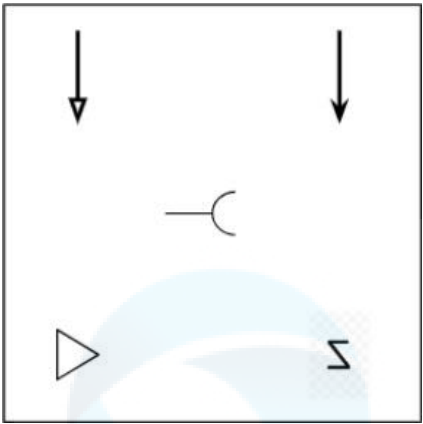
Q.No: 9 Figure A and B are related in a particular manner. Establish the same relationship between figures C and D by choosing the figure amongst these four options which would replace the question mark in figure D .



आकृति A और B एक विशेष तरीके से संबंधित हैं। इन चार विकल्पों में से वह आकृति चुनकर आकृति C और D के बीच समान संबंध स्थापित कीजिए जो आकृति D में प्रश्नवाचक चिह्न के स्थान पर आएगी।







Not Answered

Q.No: 10 A shape is shown below, followed by four options. One of them is the correct mirror image of the shape. Choose the CORRECT option.



Which of the following is the correct mirror image?

नीचे एक आकृति दिखाई गई है, जिसके बाद चार विकल्प दिए गए हैं। उनमें से एक आकृति का सही दर्पण प्रतिबिंब है। सही विकल्प चुनें।



निम्नलिखित में से कौन सा सही दर्पण प्रतिबिंब है?



Q.No: 11 What will come in place of the question mark (?) in the following equation?

**$100 \div 10 - 7 + 2 \times 6 = ?$**

निम्नलिखित समीकरण में प्रश्नवाचक चिह्न (?) के स्थान पर क्या आएगा?

**$100 \div 10 - 7 + 2 \times 6 = ?$**

12

12

5

5

20  
20  
15  
15

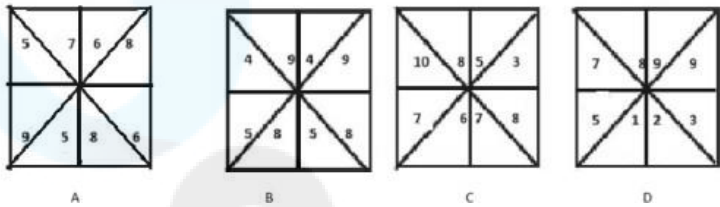
Q.No: 12	A figure consists of a square divided into 9 equal smaller squares (3×3), and 2 diagonals are drawn in the outer square. How many triangles are there? एक आकृति में एक वर्ग है जिसे 9 बराबर छोटे वर्गों (3×3) में विभाजित किया गया है, और बाहरी वर्ग में 2 विकर्ण खींचे गए हैं। इसमें कितने त्रिभुज हैं?
20	
20	
16	
16	
24	
24	
28	
28	
Not Answered	

Q.No: 13	<p><b>Post: Content Head – EdTech Division Eligibility Criteria (as on 15-02-2025):</b></p> <p>Master’s in English/Linguistics/Education with minimum 68% marks. Must have minimum 6 years of experience, with 3 years in academic content creation. Should have managed a team of 5 or more members for at least 1 year. Must have published at least 2 educational research articles in recognized journals.</p> <p><b>Special Clause:</b></p> <p>If candidate has only 1 research article, but has 8+ years of experience and holds an M.Ed. or B.Ed. degree, refer to Board of Academic Excellence. If academic marks are below 68%, but has 3+ research papers and training certifications, refer to Chief Editor.</p> <p><b>Case:</b></p> <p>Aditya has 66% in MA English, 9 years of experience (4 in content creation), led a team for 2 years, has 3 published academic research papers, and holds a B.Ed. degree.</p> <p><b>Question:</b> What should be done in Aditya’s case?</p> <p><b>पद: कंटेंट हेड – एडटेक डिवीजन पात्रता मापदंड (दिनांक 15-02-2025 तक):</b></p> <p>अंग्रेजी/भाषाविज्ञान/शिक्षा में मास्टर डिग्री न्यूनतम 68% अंकों के साथ। न्यूनतम 6 वर्ष का अनुभव होना चाहिए, जिसमें से 3 वर्ष अकादमिक कंटेंट निर्माण में हो। कम से कम 1 वर्ष के लिए 5 या अधिक सदस्यों की टीम का प्रबंधन किया हो। मान्यता प्राप्त पत्रिकाओं में कम से कम 2 शैक्षिक शोध लेख प्रकाशित किए हों।</p> <p><b>विशेष खंड:</b></p> <p>यदि उम्मीदवार के पास केवल 1 शोध लेख है, लेकिन 8+ वर्षों का अनुभव है और उसके पास एम.एड. या बी.एड. की डिग्री है, तो बोर्ड ऑफ एकेडमिक एक्सीलेंस को भेजें। यदि अकादमिक अंक 68% से कम हैं, लेकिन उसके पास 3+ शोध पत्र और प्रशिक्षण प्रमाण पत्र हैं, तो मुख्य संपादक को भेजें।</p> <p><b>मामला:</b></p> <p>आदित्य के पास एम.ए. अंग्रेजी में 66% अंक हैं, 9 वर्ष का अनुभव (जिसमें से 4 वर्ष कंटेंट निर्माण में हैं), 2 साल तक टीम का नेतृत्व किया है, उसके पास 3 प्रकाशित अकादमिक शोध पत्र हैं, और उसके पास बी.एड. की डिग्री भी है।</p> <p><b>प्रश्न:</b> आदित्य के मामले में क्या किया जाना चाहिए?</p>
Reject the candidate	
उम्मीदवार को अस्वीकार करें।	
Refer to Chief Editor	
मुख्य संपादक को भेजें।	
Select the candidate	
उम्मीदवार का चयन करें।	
Refer to Board of Academic Excellence	
शैक्षणिक उत्कृष्टता बोर्ड को भेजें।	
Not Answered	

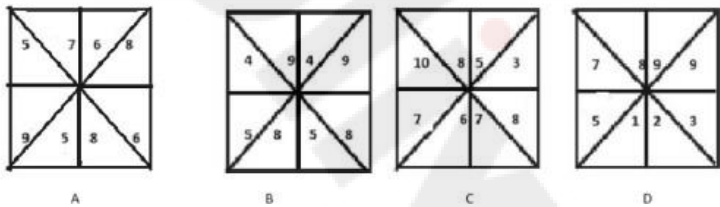
Q.No: 14	<p>In each of the following questions, two numbers are given which follow a certain logical or arithmetic relationship. Identify the same pattern and apply it to find the missing number in the second pair. Choose the correct option from the given alternatives.</p> <p><b>15 : 8 :: 31 : ?</b></p> <p>निम्नलिखित प्रत्येक प्रश्न में दो संख्याएँ दी गई हैं जो एक निश्चित तार्किक या अंकगणितीय संबंध का पालन करती हैं। उसी पैटर्न को पहचानिए और दूसरे जोड़े में लुप्त संख्या ज्ञात करने के लिए उसका प्रयोग कीजिए। दिए गए विकल्पों में से सही विकल्प चुनिए।</p> <p><b>15 : 8 :: 31 : ?</b></p>
----------	---

8  
8  
16  
16  
14  
14  
15  
15

Q.No: 15 Which figure is different from others?

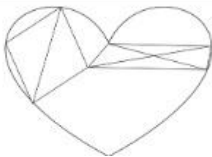


कौन सा आंकड़ा दूसरों से अलग है?

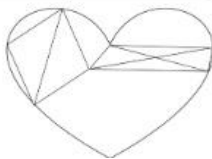


A  
A  
D  
D  
C  
C  
B  
B  
Not Answered

Q.No: 16 How many triangles are there in the given figure.



दी गई आकृति में कितने त्रिभुज हैं?



9  
9  
12  
12  
8  
8  
10  
10

Q.No: 17

**Criteria to be selected as Librarian(as on 01-08-2023):**

Must have a Bachelor's degree in Library Science (B.Lib.Sc) with at least 55% marks.

Age must be between 24 and 32 years.

Must have basic computer skills.

Must possess at least 1 year of experience in a library.

**Special Clause:**

If the candidate has no experience but has a Master's in Library Science with 60% marks, refer to Library Director.

**Case:**

Neelam is 27 years old, has completed B.Lib.Sc with 58%, holds a Master's in Library Science (62%) but has no experience. She is computer literate.

**Question:** What should be done in Neelam's case?

**लाइब्रेरियन के रूप में चयन के मानदंड (01-08-2023 तक):**

लाइब्रेरी साइंस में स्नातक की डिग्री (बी.लिब.एससी) कम से कम 55% अंकों के साथ होनी चाहिए।

आयु 24 से 32 वर्ष के बीच होनी चाहिए।

बुनियादी कंप्यूटर कौशल होना चाहिए।

लाइब्रेरी में कम से कम 1 वर्ष का अनुभव होना चाहिए।

**विशेष खंड:**

यदि उम्मीदवार के पास कोई अनुभव नहीं है, लेकिन उसके पास 60% अंकों के साथ लाइब्रेरी साइंस में मास्टर डिग्री है, तो लाइब्रेरी निदेशक से संपर्क करें।

**मामला:**

नीलम 27 वर्ष की है, उसने 58% अंकों के साथ बी.लिब.एससी पूरी की है, उसके पास लाइब्रेरी साइंस में मास्टर डिग्री (62%) है, लेकिन उसे कोई अनुभव नहीं है। वह कंप्यूटर साक्षर है।

**प्रश्न:** नीलम के मामले में क्या किया जाना चाहिए?

Select the candidate

उम्मीदवार का चयन करें

Refer to Library Director

लाइब्रेरी निदेशक से संपर्क करें

Refer to HR

मानव संसाधन विभाग से संपर्क करें

Reject the candidate

उम्मीदवार को अस्वीकार करें

Not Answered

Q.No: 18

What will come at the place of question mark?

X X X X X X	A X X X X	A X X X X Y	Y X X E A	?
----------------------------	-----------------------	-------------	-----------------------	---

प्रश्न चिन्ह के स्थान पर क्या आएगा?

X X X X X X	A X X X X	A X X X X Y	Y X X E A	?
----------------------------	-----------------------	-------------	-----------------------	---

Y
U
X
X
E
A

Y  
U  
X  
X  
E  
A

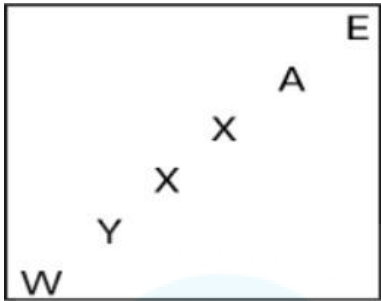
E  
A  
X  
X  
T  
Y

E  
A  
X  
X  
T  
Y

Y  
X  
X  
X  
E  
A

Y  
X  
X  
X  
E  
A

W Y X X A E



Not Answered

Q.No: 19 In each of the following questions, a specific relationship is given between two words. Identify the word that shares a similar semantic relationship with the given pair. Choose the most appropriate option from the four choices given below.  
**Knight : Armor :: Astronaut : ?**

निम्नलिखित प्रत्येक प्रश्न में दो शब्दों के बीच एक विशिष्ट संबंध दिया गया है। उस शब्द की पहचान कीजिए जो दिए गए युग्म के साथ समान अर्थ संबंध साझा करता है। नीचे दिए गए चार विकल्पों में से सबसे उपयुक्त विकल्प चुनिए।  
**नाइट : कवच :: अंतरिक्ष यात्री : ?**

Jetpack

जेटपैक

Spacesuit

स्पेससूट

Shuttle

शटल

Oxygen Tank

ऑक्सीजन टैंक

Q.No: 20 Find the next term in the given series. 3A, 6C, 13F, 28J, ?

दी गई श्रृंखला में अगला पद ज्ञात कीजिए। 3A, 6C, 13F, 28J, ?

59Q

59Q

56P

56P

54N

54N

62L

62L

Q.No: 21 At a banquet, every 2 people shared a cake, every 6 people shared a bowl of soup, and every 8 people shared a platter of fruit. There were a total of 42 items. How many people were present at the banquet?

एक भोज में, हर 2 लोगों ने एक केक, हर 6 लोगों ने एक सूप का कटोरा और हर 8 लोगों ने एक फल की थाली साझा की। कुल 42 आइटम थे। भोज में कितने लोग मौजूद थे?

30

30

20

20

24

24

28

28

Not Answered

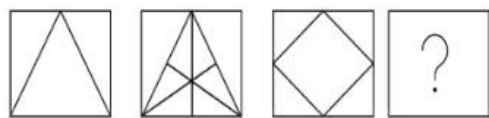


Q.No: 22	<p><b>Post: Security Guard</b></p> <p><b>Eligibility Criteria (as on 01-06-2025):</b></p> <p>Must be between 25 and 35 years of age.</p> <p>Must have passed 10th standard.</p> <p>Must be physically fit and have no criminal record.</p> <p><b>Case:</b></p> <p>Suresh is 29 years old, has passed Class 10, is physically fit, and has no police record.</p> <p>What should be done in Suresh's case?</p> <p><b>पद: सुरक्षा गार्ड</b></p> <p><b>पात्रता मानदंड (01-06-2025 तक):</b></p> <p>आयु 25 से 35 वर्ष के बीच होनी चाहिए।</p> <p>10वीं कक्षा उत्तीर्ण होना चाहिए।</p> <p>शारीरिक रूप से स्वस्थ होना चाहिए और कोई आपराधिक रिकॉर्ड नहीं होना चाहिए।</p> <p><b>मामला:</b></p> <p>सुरेश 29 वर्ष का है, उसने 10वीं कक्षा उत्तीर्ण की है, शारीरिक रूप से स्वस्थ है और उसका कोई पुलिस रिकॉर्ड नहीं है।</p> <p>सुरेश के मामले में क्या किया जाना चाहिए?</p>
	Refer to Police Verification
	पुलिस सत्यापन देखें
	Data incomplete
	डेटा अधूरा
	Select the candidate
	उम्मीदवार का चयन करें
	Reject the candidate
	उम्मीदवार को अस्वीकार करें
	Not Answered

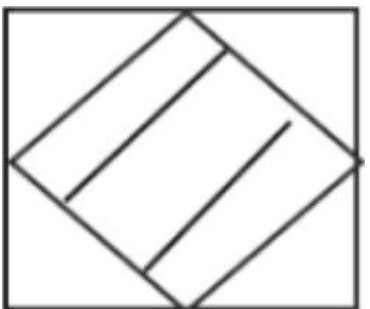
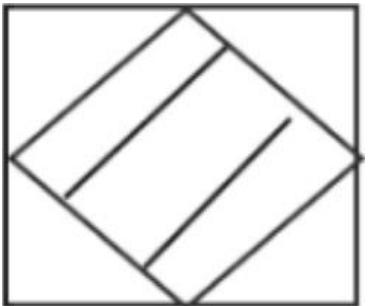
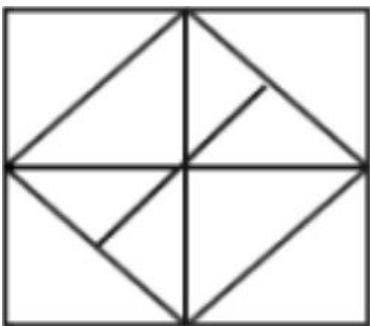
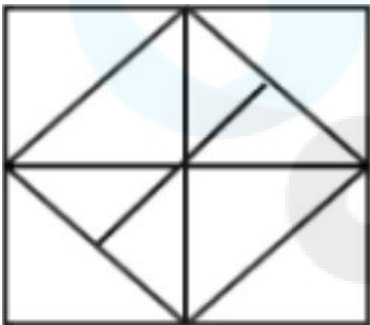
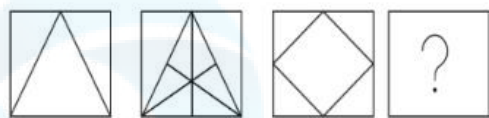
Q.No: 23	<p>In each of the following questions, two numbers are given which follow a certain logical or arithmetic relationship. Identify the same pattern and apply it to find the missing number in the second pair. Choose the correct option from the given alternatives.</p> <p><b>51728 : 73940 :: 38641 : ?</b></p> <p>निम्नलिखित प्रत्येक प्रश्न में दो संख्याएँ दी गई हैं जो एक निश्चित तार्किक या अंकगणितीय संबंध का पालन करती हैं। उसी पैटर्न को पहचानिए और दूसरे जोड़े में लुप्त संख्या ज्ञात करने के लिए उसका प्रयोग कीजिए। दिए गए विकल्पों में से सही विकल्प चुनिए।</p> <p><b>51728 : 73940 :: 38641 : ?</b></p>
	50863
	50863
	59853
	59853
	50862
	50862
	60974
	60974

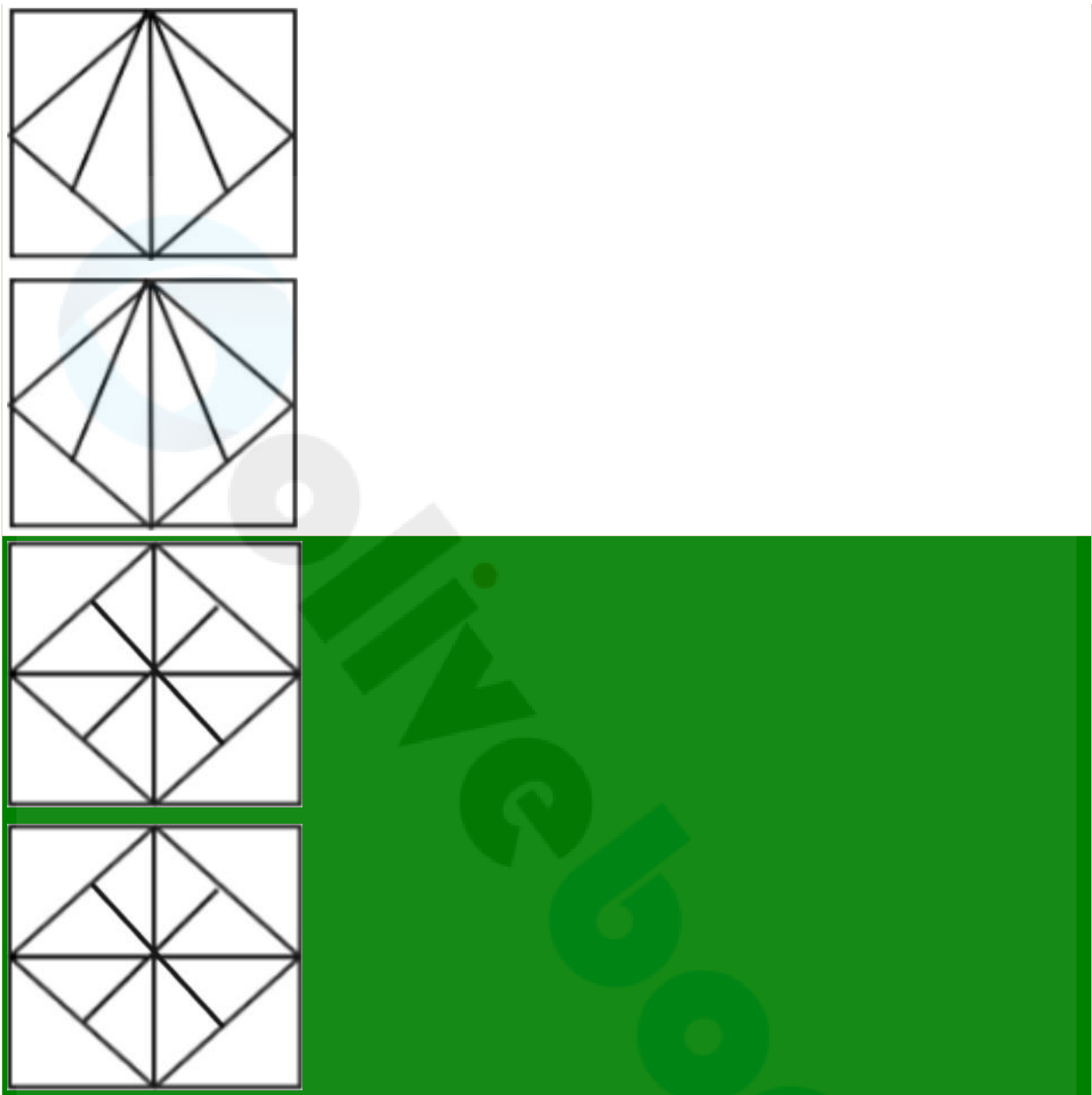
Q.No: 24	<p>Choose the CORRECT option.</p> <p>Address 1: Mr. Rohit Sharma, 123/A, Rose Villa, Green Park, Delhi – 110016</p> <p>Address 2: Mr. R. Sharma, 123-A, Rose Villa, Green Park, New Delhi – 110016</p> <p>Are the two addresses likely to refer to the same person?</p> <p>सही विकल्प चुनें।</p> <p>पता 1: श्री रोहित शर्मा, 123/ए, रोज़ विला, ग्रीन पार्क, दिल्ली – 110016</p> <p>पता 2: श्री आर. शर्मा, 123-ए, रोज़ विला, ग्रीन पार्क, नई दिल्ली – 110016</p> <p>क्या दोनों पते एक ही व्यक्ति को संदर्भित करते हैं?</p>
	No, the cities are different
	नहीं, शहर अलग हैं
	No, the names are different
	नहीं, नाम अलग हैं
	No, the house numbers don't match
	नहीं, घर के नंबर मेल नहीं खाते
	Yes, both addresses are the same
	हां, दोनों पते एक ही हैं

Q.No: 25      What will come at the place of question mark?



प्रश्न चिन्ह के स्थान पर क्या आएगा?





<p>Q.No: 26</p>	<p><b>Read the information carefully and identify the correct relationship between the persons mentioned in the question.</b></p> <p>Rita is the mother of Deepa. Deepa is the sister of Aman. Aman is the father of Kabir.</p> <p><b>Question:</b> How is Rita related to Kabir?</p> <p><b>दी गई जानकारी को ध्यानपूर्वक पढ़ें और प्रश्न में उल्लिखित व्यक्तियों के बीच सही संबंध पहचानें।</b></p> <p>रीता, दीपा की माँ है। दीपा, अमन की बहन है। अमन, कबीर का पिता है।</p> <p><b>प्रश्न:</b> रीता, कबीर से किस प्रकार संबंधित है?</p> <div><div>Aunt</div><div>चाची</div><div>Sister</div><div>बहन</div><div>Grandmother</div><div>दादी</div><div>Mother</div><div>माँ</div></div>
-----------------	--

Q.No: 27	<p>If + means <math>\div</math>, <math>\div</math> means <math>-</math>, <math>-</math> means <math>+</math>, and <math>\times</math> means <math>\times</math> then, what is <math>(200 \div 50 - 10) \times 5 + 25</math>?</p> <p>यदि + का अर्थ <math>\div</math>, <math>\div</math> का अर्थ <math>-</math>, <math>-</math> का अर्थ <math>+</math> और <math>\times</math> का अर्थ <math>\times</math> है, तो <math>(200 \div 50 - 10) \times 5 + 25</math> क्या है?</p>
32	
32	
34	
34	
36	
36	
30	
30	
Not Answered	

Q.No: 28

How many dots lie opposite to the face having five dots, when the given figure is folded to form a cube?

जब दी गई आकृति को मोड़कर घन बनाया जाता है, तो पांच बिंदुओं वाले फलक के विपरीत कितने बिंदु होते हैं?

4

4

3

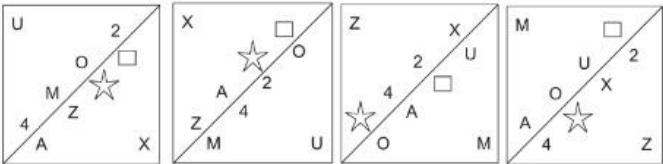
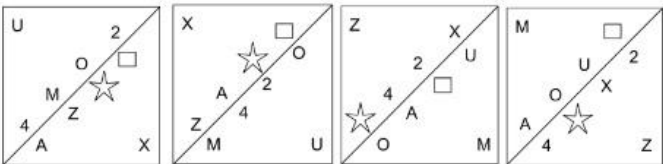
3

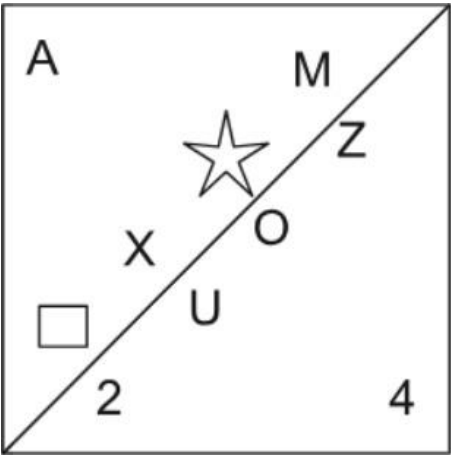
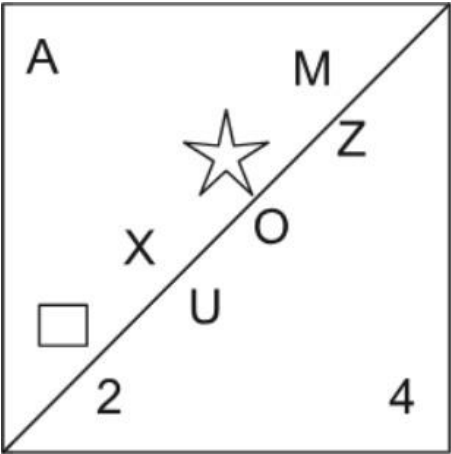
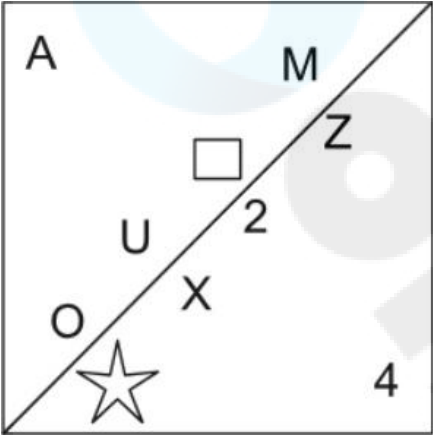
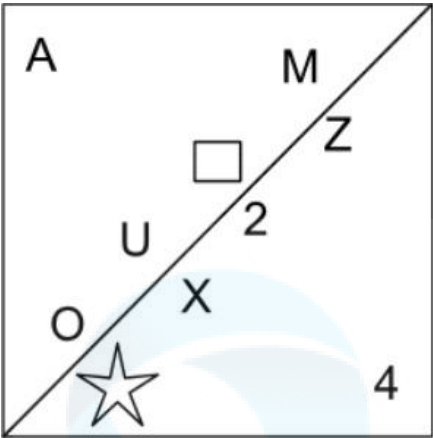
2

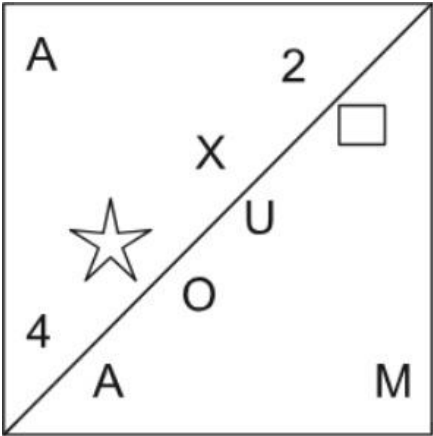
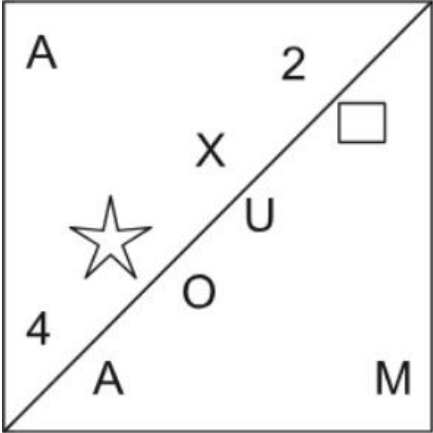
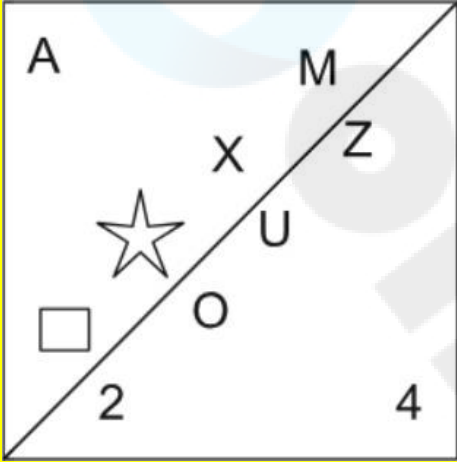
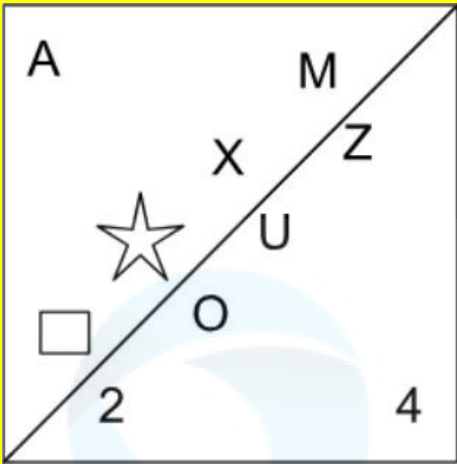
2

1

1

Q.No: 29	<p>Which of the following figures will complete the figural series given below?</p>  <p>निम्नलिखित में से कौन सी आकृति नीचे दी गई आकृति श्रृंखला को पूरा करेगी?</p> 
----------	--





Not Answered

Q.No: 30 In each of the following questions, a number series is given. In each series, only one number is incorrect. Identify the wrong number.  
**1, 4, 9, 16, 26, 36.**  
निम्नलिखित प्रत्येक प्रश्न में एक संख्या श्रृंखला दी गई है। प्रत्येक श्रृंखला में केवल एक संख्या गलत है। गलत संख्या पहचानिए। **1, 4, 9, 16, 26, 36.**

16
16
4
4
9
9
26
26
Not Answered

Q.No: 31	<p><b>Criteria to be selected as Assistant Teacher</b></p> <p><b>Eligibility Criteria (as on 31-03-2024):</b></p> <p>Must have a B.Ed. degree with minimum 50% marks.</p> <p>Age must be between 25 and 35 years.</p> <p>Must have 2 years teaching experience.</p> <p>Must be willing to work in rural schools.</p> <p><b>Special Rule:</b></p> <p>If candidate has 1 year teaching experience but a Master's in Education, refer to Vice Principal.</p> <p><b>Case:</b></p> <p>Sonal is 28 years old with a B.Ed. (55%), a Master's in Education, and 1 year experience. She agrees to work in rural areas. What should be done in Sonal's case?</p> <p><b>सहायक शिक्षक के रूप में चयन हेतु मानदंड</b></p> <p><b>पात्रता मानदंड (31-03-2024 तक):</b></p> <p>न्यूनतम 50% अंकों के साथ बी.एड. की डिग्री होनी चाहिए।</p> <p>आयु 25 से 35 वर्ष के बीच होनी चाहिए।</p> <p>2 वर्ष का शिक्षण अनुभव होना चाहिए।</p> <p>ग्रामीण विद्यालयों में कार्य करने के लिए इच्छुक होना चाहिए।</p> <p><b>विशेष नियम:</b></p> <p>यदि उम्मीदवार के पास 1 वर्ष का शिक्षण अनुभव है, लेकिन शिक्षा में स्नातकोत्तर है, तो उप-प्राचार्य से संपर्क करें।</p> <p><b>मामला:</b></p> <p>सोनल 28 वर्ष की है और उसके पास बी.एड. (55%), शिक्षा में स्नातकोत्तर और 1 वर्ष का अनुभव है। वह ग्रामीण क्षेत्रों में कार्य करने के लिए सहमत है। सोनल के मामले में क्या किया जाना चाहिए?</p>
	Reject the candidate
	उम्मीदवार को अस्वीकार करें
	Refer to Vice Principal
	उप प्रधानाचार्य से संपर्क करें
	Case cannot be considered
	मामले पर विचार नहीं किया जा सकता
	Select the candidate
	उम्मीदवार का चयन करें
	Not Answered

Q.No: 32	<p>If a dice has numbers 1 to 6 on its faces and face 1 is opposite to 6, 3 is opposite to 4, then what will be the number on the face opposite to the face showing '2'?</p> <p>अगर एक पासे के फलकों पर 1 से 6 तक की संख्याएँ हैं और फलक 1, 6 के विपरीत है, 3, 4 के विपरीत है, तो '2' दर्शाने वाले फलक के विपरीत फलक पर संख्या क्या होगी?</p>
	3
	3
	5
	5
	4
	4
	6
	6

Q.No: 33	<p>3, 7, 11, 15, 19, 22 - which is the odd one out?</p> <p>3, 7, 11, 15, 19, 22 - इनमें से कौन सा विषम है?</p>
	7
	7

22	
22	
15	
15	
3	
3	

Q.No: 34	<p>In each of the following questions, a specific pattern is followed for both the letters and the numbers. Identify the set of numbers that correctly fills the blanks in the given sequence. <b>C, 6, F, 24, I, 54, L, __ , O, __ , R, 216, U, 294, X, 384</b></p> <p>निम्नलिखित प्रत्येक प्रश्न में, अक्षरों और संख्याओं दोनों के लिए एक विशिष्ट पैटर्न दिया गया है। दिए गए क्रम में रिक्त स्थानों को सही ढंग से भरने वाले संख्याओं के समूह को पहचानिए।</p> <p><b>C, 6, F, 24, I, 54, L, __ , O, __ , R, 216, U, 294, X, 384</b></p>
(90, 145)	
(90, 145)	
(132, 210)	
(132, 210)	
(140, 220)	
(140, 220)	
(96, 150)	
(96, 150)	
Not Answered	

Q.No: 35	<p>Among the given figures, identify the one that does not belong to the group based on the pattern.</p> <div> <div> <div>Z</div> <div>Y</div> <div>A</div> <div>L</div> </div> <div> <div>A</div> <div>B</div> <div>C</div> <div>D</div> </div> </div> <p>दी गई आकृतियों में से उस आकृति को पहचानिए जो पैटर्न के आधार पर समूह से संबंधित नहीं है।</p> <div> <div> <div>Z</div> <div>Y</div> <div>A</div> <div>L</div> </div> <div> <div>A</div> <div>B</div> <div>C</div> <div>D</div> </div> </div>
B	
B	
D	
D	
C	
C	
A	
A	

Q.No: 36	<p>Complete the analogy: CAB : EDC :: ONM : ?</p> <p>सादृश्य पूरा करें: CAB : EDC :: ONM : ?</p>
TSR	
TSR	
QPO	
QPO	
RQP	
RQP	
QON	
QON	



Q.No: 37

**Read the situation and choose the best judgment:**

You've just finished eating at a busy restaurant and pay for your meal with cash. As the server hands you the change, you notice they have mistakenly given you significantly more money back than you were owed. The server seems overwhelmed and rushes to attend to another table.

**Question:** Given this situation, which of the following is the most ethical and responsible action?

**स्थिति को समझें और सबसे अच्छा निर्णय चुनें:**

आपने अभी-अभी एक व्यस्त रेस्टोरेंट में खाना खाया है और नकद भुगतान किया है। जैसे ही सर्वर आपको बकाया पैसे देता है, आप देखते हैं कि उन्होंने गलती से आपको बकाया राशि से कहीं ज्यादा पैसे वापस कर दिए हैं। सर्वर बहुत परेशान लगता है और जल्दी से दूसरी टेबल पर चला जाता है।

**प्रश्न:** इस स्थिति में, निम्नलिखित में से कौन सा सबसे नैतिक और ज़िम्मेदाराना कदम है?

Politely get the server's attention, point out the mistake, and return the excess change.

विनम्रतापूर्वक सर्वर का ध्यान आकर्षित करें, गलती बताएं, और अतिरिक्त राशि लौटा दें।

Quietly leave the exact amount of the overpayment on the table as an extra tip.

अतिरिक्त भुगतान की सही राशि चुपचाप मेज पर अतिरिक्त टिप के रूप में छोड़ दें।

Announce loudly that the server made a mistake with your change, so others are aware.

जोर से घोषणा करें कि सर्वर ने आपके बदलाव में गलती की है, ताकि अन्य लोग जान सकें।

Discreetly put the extra change in your pocket and leave, assuming it's the restaurant's mistake.

सावधानी से अतिरिक्त पैसे अपनी जेब में रखें और यह मानकर चले जाएं कि यह रेस्तरां की गलती है।

Q.No: 38

In this figure, how many squares are there?

इस आकृति में कितने वर्ग हैं?

9

9

30

30

36

36

14

14

Q.No: 39

Which word is different from the rest?

कौन सा शब्द बाकी से अलग है?

Gun

बंदूक

Spoon

चम्मच

Knife

चाकू

Sword

तलवार

Q.No: 40 In each of the following questions, a specific relationship is given between two words. Identify the word that shares a similar semantic relationship with the given pair. Choose the most appropriate option from the four choices given below.  
**Fire : Heat :: Friction : ?**  
निम्नलिखित प्रत्येक प्रश्न में दो शब्दों के बीच एक विशिष्ट संबंध दिया गया है। उस शब्द की पहचान कीजिए जो दिए गए युग्म के साथ समान अर्थ संबंध साझा करता है। नीचे दिए गए चार विकल्पों में से सबसे उपयुक्त विकल्प चुनिए।  
आग : ऊष्मा :: घर्षण : ?

Temperature

तापमान

Motion

गति

Burn

जलाना

Energy

ऊर्जा

Q.No: 41 If  $\triangle : 3 :: \square : ?$   
अगर  $\triangle : 3 :: \square : ?$

5

5

6

6

7

7

4


4

Q.No: 42 In the given sequence what is the missing shape?



दिए गए अनुक्रम में लुप्त आकृति कौन सी है?

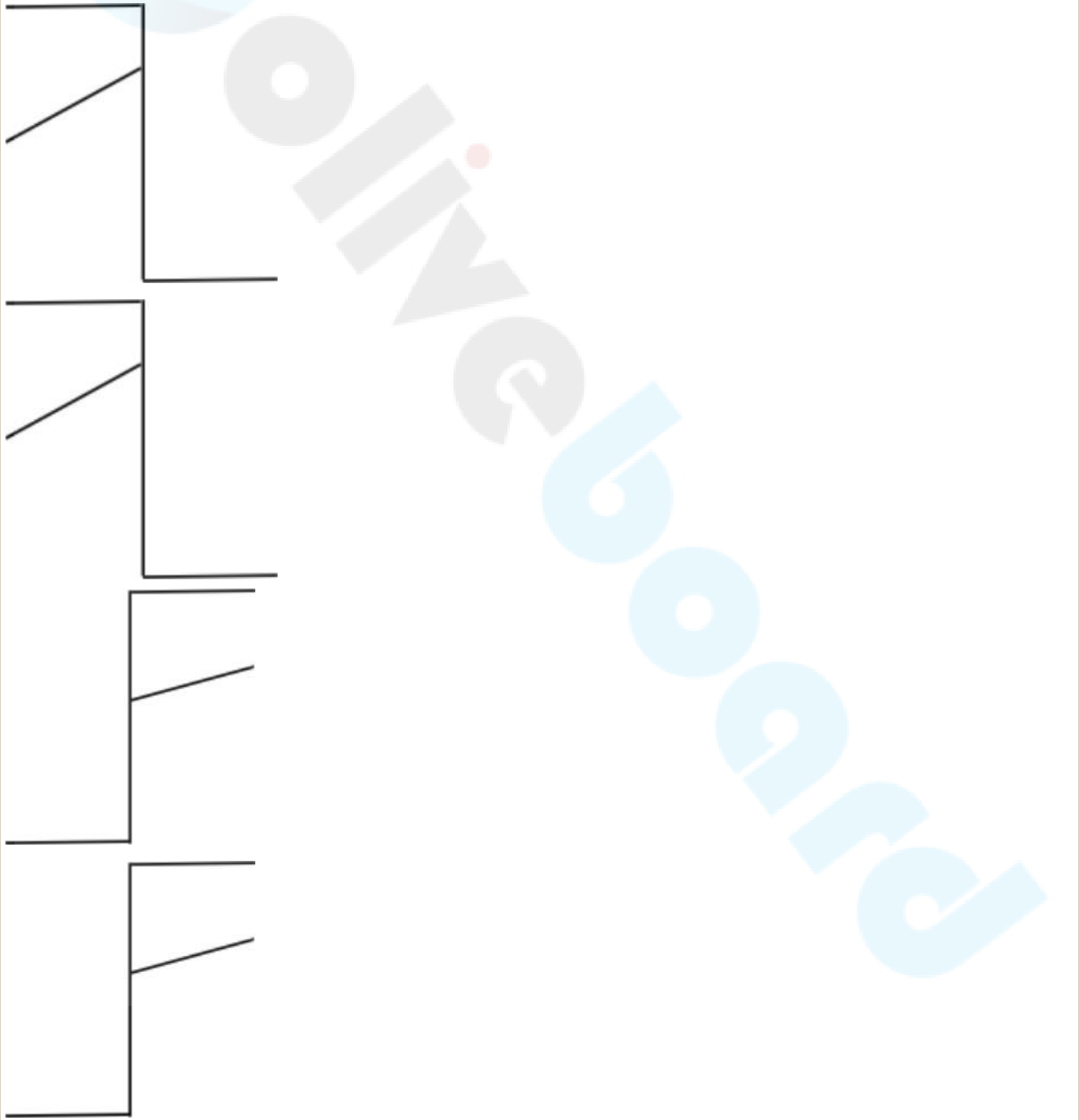


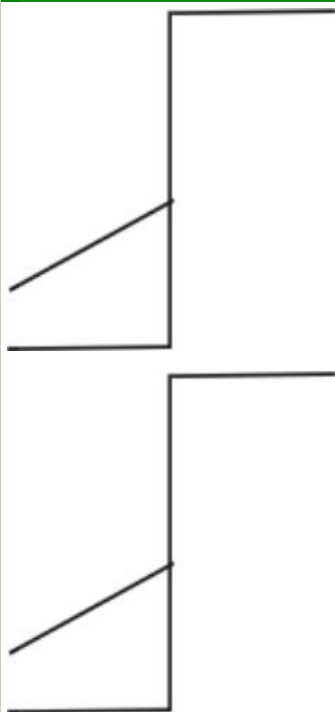
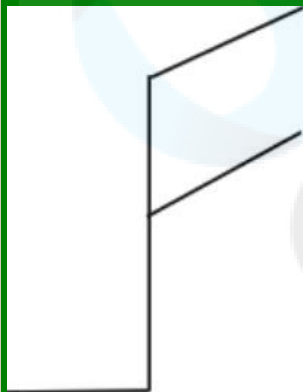
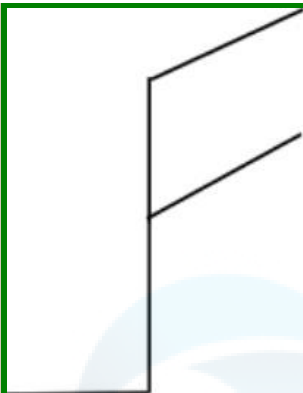




Q.No: 43	In each of the following questions, two numbers are given which follow a certain logical or arithmetic relationship. Identify the same pattern and apply it to find the missing number in the second pair. Choose the correct option from the given alternatives.
	<b>25 : 30 :: 36 : ?</b>
	निम्नलिखित प्रत्येक प्रश्न में दो संख्याएँ दी गई हैं जो एक निश्चित तार्किक या अंकगणितीय संबंध का पालन करती हैं। उसी पैटर्न को पहचानिए और दूसरे जोड़े में लुप्त संख्या ज्ञात करने के लिए उसका प्रयोग कीजिए। दिए गए विकल्पों में से सही विकल्प चुनिए।
	<b>25 : 30 :: 36 : ?</b>
43	
43	
42	
41	
41	
46	
46	

Q.No: 44	If: $2 \times 3 = 13$ $4 \times 5 = 41$ $6 \times 7 = ?$ अगर: $2 \times 3 = 13$ , $4 \times 5 = 41$ , $6 \times 7 = ?$
83	
83	
89	
89	
87	
87	
85	
85	
Not Answered	

Q.No: 45	Choose the figure which is different from the rest? वह आकृति चुनें जो बाकी से अलग है?
	



Q.No: 46 In each of the following questions, a specific relationship is given between two words. Identify the word that shares a similar semantic relationship with the given pair. Choose the most appropriate option from the four choices given below.

**Theory : Practice :: Hypothesis : ?**

निम्नलिखित प्रत्येक प्रश्न में दो शब्दों के बीच एक विशिष्ट संबंध दिया गया है। उस शब्द की पहचान कीजिए जो दिए गए युग्म के साथ समान अर्थ संबंध साझा करता है। नीचे दिए गए चार विकल्पों में से सबसे उपयुक्त विकल्प चुनिए।

**सिद्धांत : अभ्यास :: परिकल्पना : ?**

**Observation**

**अवलोकन**

**Result**

**परिणाम**

**Experiment**

**प्रयोग**

**Proof**

Q.No: 47

If  $4x + 5y = 33$  and  $3x - 2y = 14$  what is  $x - y$ ?

यदि  $4x + 5y = 33$  और  $3x - 2y = 14$  है तो  $x - y$  क्या है?

4

4

1

1

3

3

2

2

Not Answered

Q.No: 48

Address A: Riya Kapoor, 7/2, Lake View Road, Kolkata – 700029  
Address B: R. Kapoor, 7/2A, Lake View Rd, Kolkata – 700029  
What is the most significant difference between the two addresses?

पता A: रिया कपूर, 7/2, लेक व्यू रोड, कोलकाता – 700029  
पता B: आर. कपूर, 7/2A, लेक व्यू रोड, कोलकाता – 700029  
दोनों पत्तों के बीच सबसे महत्वपूर्ण अंतर क्या है?

Different road

अलग सड़क

Different house number

अलग मकान का नंबर

Different surname

अलग उपनाम

Different city

अलग शहर

Q.No: 49

An unfolded box (cube or cuboid) appeared as shown in the figure, when sheet is folded to form a box. find the number on the face opposite to 5.

1

2

3

4

5

6

जब शीट को मोड़कर बॉक्स बनाया जाता है तो एक खुला बॉक्स (घन या घनाभ) आकृति में दिखाए अनुसार दिखाई देता है। 5 के विपरीत फलक पर संख्या ज्ञात कीजिए।

1

2

3

4

5

6

4

4

1

1

2

2

Q.No: 50

A squash championship has 111 participants. In a knockout format, what is the total number of matches played?

एक स्क्वैश चैंपियनशिप में 111 प्रतिभागी हैं। नॉकआउट प्रारूप में, खेले जाने वाले मैचों की कुल संख्या कितनी है?

110
110
109
109
111
111
112
112
Not Answered

PART - B (General Awareness)

Q.No: 51	Which Indian woman was the pioneer in winning a silver medal at the Olympic Games? ओलंपिक खेलों में रजत पदक जीतने वाली पहली भारतीय महिला खिलाड़ी कौन थीं?
Saina Nehwal	
सायना नेहवाल	
Karnam Malleswari	
कर्णम मल्लेश्वरी	
Mary Kom	
मैरी कॉम	
P.V. Sindhu	
पी. वी. सिंधु	
Not Answered	

Q.No: 52	Match the columns: <table><thead><tr><th>Column A (Land-Use Category)</th><th>Column B (Description – Shuffled)</th></tr></thead><tbody><tr><td>A. Miscellaneous Tree Crops &amp; Groves</td><td>1. Land left fallow for more than 1 year but less than 5 years</td></tr><tr><td>B. Culturable Wasteland</td><td>2. Privately owned land under orchards and fruit trees</td></tr><tr><td>C. Current Fallow</td><td>3. Land left uncultivated for over 5 years</td></tr><tr><td>D. Fallow other than Current Fallow</td><td>4. Land left fallow for one or less than one year</td></tr></tbody></table> स्तंभों का मिलान करें: <table><thead><tr><th>स्तंभ A (भूमि-उपयोग श्रेणी)</th><th>स्तंभ B (विवरण - फेरबदल)</th></tr></thead><tbody><tr><td>A. विविध वृक्ष फसलें और उपवन</td><td>1. 1 वर्ष से अधिक लेकिन 5 वर्ष से कम समय के लिए बंजर छोड़ी गई भूमि</td></tr><tr><td>B. खेती योग्य बंजर भूमि</td><td>2. बागों और फलों के पेड़ों के नीचे निजी स्वामित्व वाली भूमि</td></tr><tr><td>C. वर्तमान बंजर भूमि</td><td>3. 5 वर्ष से अधिक समय तक बिना खेती के छोड़ी गई भूमि</td></tr><tr><td>D. वर्तमान बंजर भूमि के अलावा अन्य बंजर भूमि</td><td>4. एक वर्ष या उससे कम समय के लिए बंजर छोड़ी गई भूमि</td></tr></tbody></table>	Column A (Land-Use Category)	Column B (Description – Shuffled)	A. Miscellaneous Tree Crops & Groves	1. Land left fallow for more than 1 year but less than 5 years	B. Culturable Wasteland	2. Privately owned land under orchards and fruit trees	C. Current Fallow	3. Land left uncultivated for over 5 years	D. Fallow other than Current Fallow	4. Land left fallow for one or less than one year	स्तंभ A (भूमि-उपयोग श्रेणी)	स्तंभ B (विवरण - फेरबदल)	A. विविध वृक्ष फसलें और उपवन	1. 1 वर्ष से अधिक लेकिन 5 वर्ष से कम समय के लिए बंजर छोड़ी गई भूमि	B. खेती योग्य बंजर भूमि	2. बागों और फलों के पेड़ों के नीचे निजी स्वामित्व वाली भूमि	C. वर्तमान बंजर भूमि	3. 5 वर्ष से अधिक समय तक बिना खेती के छोड़ी गई भूमि	D. वर्तमान बंजर भूमि के अलावा अन्य बंजर भूमि	4. एक वर्ष या उससे कम समय के लिए बंजर छोड़ी गई भूमि
Column A (Land-Use Category)	Column B (Description – Shuffled)																				
A. Miscellaneous Tree Crops & Groves	1. Land left fallow for more than 1 year but less than 5 years																				
B. Culturable Wasteland	2. Privately owned land under orchards and fruit trees																				
C. Current Fallow	3. Land left uncultivated for over 5 years																				
D. Fallow other than Current Fallow	4. Land left fallow for one or less than one year																				
स्तंभ A (भूमि-उपयोग श्रेणी)	स्तंभ B (विवरण - फेरबदल)																				
A. विविध वृक्ष फसलें और उपवन	1. 1 वर्ष से अधिक लेकिन 5 वर्ष से कम समय के लिए बंजर छोड़ी गई भूमि																				
B. खेती योग्य बंजर भूमि	2. बागों और फलों के पेड़ों के नीचे निजी स्वामित्व वाली भूमि																				
C. वर्तमान बंजर भूमि	3. 5 वर्ष से अधिक समय तक बिना खेती के छोड़ी गई भूमि																				
D. वर्तमान बंजर भूमि के अलावा अन्य बंजर भूमि	4. एक वर्ष या उससे कम समय के लिए बंजर छोड़ी गई भूमि																				
A-2, B-3, C-4, D-1																					
A-2, B-3, C-4, D-1																					
A-3, B-2, C-1, D-4																					
A-3, B-2, C-1, D-4																					
A-1, B-4, C-2, D-3																					
A-1, B-4, C-2, D-3																					



A-4, B-1, C-3, D-2

A-4, B-1, C-3, D-2

Not Answered

Q.No: 53	Which of the following factors contributes to the low child sex ratio in some economically developed Northern states of India?  1) Increased accessibility to prenatal sex-determination methods 2) High levels of female literacy and empowerment 3) Societal preference for male children in inheritance and family support 4) Strengthened enforcement of gender-equal policies  निम्नलिखित में से कौन सा कारक भारत के कुछ आर्थिक रूप से विकसित उत्तरी राज्यों में कम बाल लिंग अनुपात में योगदान देता है?  1) जन्मपूर्व लिंग निर्धारण विधियों तक पहुँच में वृद्धि 2) महिला साक्षरता और सशक्तिकरण का उच्च स्तर 3) विरासत और पारिवारिक सहायता में पुरुष बच्चों के लिए सामाजिक वरीयता 4) लिंग-समान नीतियों का सुदृढ़ प्रवर्तन
2 and 3	
2 और 3	
2 and 4	
2 और 4	
1 and 3	
1 और 3	
1 and 4	
1 और 4	
Not Answered	

Q.No: 54	Sattriya, one of the classical dances of India, was introduced by which saint?  भारत के शास्त्रीय नृत्यों में से सत्रिया नृत्य की शुरुआत किस संत ने की थी?
Sankardev	
शंकरदेव	
Chaitanya Mahaprabhu	
चैतन्य महाप्रभु	
Kabir	
कबीर	
Tulsidas	
तुलसीदास	
Not Answered	

Q.No: 55	How did India's trade policy reforms post-1991 impact the import of capital goods?  1991 के बाद भारत के व्यापार नीति सुधारों ने पूंजीगत वस्तुओं के आयात को किस प्रकार प्रभावित किया?
Linked capital imports only to foreign companies	
केवल विदेशी कंपनियों से जुड़े पूंजीगत आयात	
Reduced tariffs and removed licensing	
टैरिफ कम कर दिए गए और लाइसेंसिंग हटा दी गई	
Imposed import quotas on machinery	
मशीनरी पर आयात कोटा लगाया गया	
Banned all capital imports	
सभी पूंजीगत आयातों पर प्रतिबंध लगा दिया गया	

Q.No: 56	Who was the first woman to be the president of the Indian National Congress?  भारतीय राष्ट्रीय कांग्रेस की अध्यक्ष बनने वाली पहली महिला कौन थीं?
Kasturba Gandhi	
कस्तूरबा गांधी	

Kamala Nehru
कमला नेहरू
Annie Besant
एनी बेसेंट
Sarojini Naidu
सरोजिनी नायडू

Q.No: 57	Which of the following is a benefit of measuring happiness in a country? निम्नलिखित में से कौन-सा किसी देश में 'सुख' मापने का एक लाभ है?
Tracking crime rates अपराध दर की निगरानी	
Improving economic statistics only केवल आर्थिक आंकड़ों में सुधार	
Understanding citizens' mental and emotional well-being नागरिकों की मानसिक एवं भावनात्मक भलाई को समझना	
Predicting election results चुनाव परिणामों की भविष्यवाणी	

Q.No: 58	In which year did Toni Morrison become the first African-American woman to win the Nobel Prize in Literature? टोनी मॉरिसन किस वर्ष साहित्य में नोबेल पुरस्कार जीतने वाली पहली अफ्रीकी-अमेरिकी महिला बनीं?
1991	
1991	
1995	
1995	
1993	
1993	
1987	
1987	
Not Answered	

Q.No: 59	According to Section 21 of the Bharatiya Nagarik Suraksha Sanhita, 2023, which of the following statements is <b>correct</b> regarding the trial of offences under Sections 64 to 71 of the Bharatiya Nyaya Sanhita, 2023? भारतीय नागरिक सुरक्षा संहिता, 2023 की धारा 21 के अनुसार, भारतीय न्याय संहिता, 2023 की धारा 64 से 71 के तहत अपराधों के परीक्षण के संबंध में निम्नलिखित में से कौन सा कथन सही है?
The trial must be conducted by any police officer of the rank of DSP and above. मुकदमा डीएसपी या उससे ऊपर के रैंक के किसी भी पुलिस अधिकारी द्वारा चलाया जाना चाहिए।	
These offences must be tried only in a High Court under a male judge. इन अपराधों की सुनवाई केवल उच्च न्यायालय में पुरुष न्यायाधीश के अधीन ही की जानी चाहिए।	
Such offences are exclusively triable by Executive Magistrates. ऐसे अपराधों का परीक्षण विशेष रूप से कार्यपालक मजिस्ट्रेट द्वारा किया जा सकता है।	
These offences shall, as far as practicable, be tried by a court presided over by a woman. इन अपराधों की सुनवाई, जहां तक संभव हो, महिला की अध्यक्षता वाली अदालत द्वारा की जाएगी।	
Not Answered	

Q.No: 60

Match the column:

Column A (Status Category)	Column B (Public Sector Enterprise)
A. Maharatna	1. Mahanagar Telephone Nigam Limited
B. Navratna	2. Indian Railway Catering and Tourism Corporation
C. Miniratna	3. Steel Authority of India Limited

स्तंभ का मिलान करें:

कॉलम A (स्थिति श्रेणी)	कॉलम B (सार्वजनिक क्षेत्र उद्यम)
A. महारत्न	1. महानगर टेलीफोन निगम लिमिटेड
B. नवरत्न	2. भारतीय रेलवे खानपान एवं पर्यटन निगम
C. मिनीरत्न	3. स्टील अथॉरिटी ऑफ इंडिया लिमिटेड

A-1, B-2, C-3

A-1, B-2, C-3

A-2, B-3, C-1

A-2, B-3, C-1

A-3, B-1, C-2

A-3, B-1, C-2

A-1, B-3, C-2

A-1, B-3, C-2

Q.No: 61

Bihu is a folk music and dance form associated with which Indian state?  
बिहू लोक संगीत और नृत्य का पारंपरिक रूप भारत के किस राज्य से जुड़ा हुआ है?

Kerala

केरल

Gujarat

गुजरात

Assam

असम

Punjab

पंजाब

Q.No: 62

What is used to measure the health dimension in HDI?  
मानव विकास सूचकांक में स्वास्थ्य आयाम को मापने के लिए किसका उपयोग किया जाता है?

Life expectancy at birth

जन्म पर जीवन प्रत्याशा

Infant mortality rate

शिशु मृत्यु दर

Access to clean water

स्वच्छ जल तक पहुंच

Nutritional status

पोषक तत्वों का स्तर

Not Answered

Q.No: 63

Bihu, the festival of Assam, is celebrated to mark:  
असम में मनाया जाने वाला बिहू पर्व किस अवसर पर आयोजित किया जाता है?

The winter solstice
शीत अयनांत (विंटर सोल्स्टाइस)
The new harvest
नई फसल का स्वागत
The victory of good over evil
अच्छाई की बुराई पर विजय
The end of the monsoon
मानसून की समाप्ति
Not Answered

Q.No: 64	Where was the National Cadets Judo Championships 2024-25 held? राष्ट्रीय कैडेट्स जूडो चैंपियनशिप 2024-25 कहाँ आयोजित की गई?
Odisha	
ओडिशा	
Delhi	
दिल्ली	
Maharashtra	
महाराष्ट्र	
Goa	
गोवा	
Not Answered	

Q.No: 65	<p>Read the following statements carefully:</p> <p><b>Statement I:</b> A pressure cooker operates by decreasing the pressure inside, which lowers the boiling point of water.</p> <p><b>Statement II:</b> Food cooks faster in a pressure cooker because the higher pressure allows water to boil at a temperature above 100°C.</p> <p><b>Statement III:</b> The superheated steam within the cooker increases the rate of heat transfer to the food, leading to faster cooking.</p> <p>Which of the statements given above <b>is/are correct?</b></p> <p><b>निम्नलिखित कथनों को ध्यानपूर्वक पढ़ें:</b></p> <p><b>कथन I:</b> प्रेशर कुकर अंदर के दाब को कम करके काम करता है, जिससे पानी का क्वथनांक कम हो जाता है।</p> <p><b>कथन II:</b> प्रेशर कुकर में खाना तेज़ी से पकता है क्योंकि उच्च दाब पानी को 100°C से अधिक तापमान पर उबलने देता है।</p> <p><b>कथन III:</b> कुकर के अंदर की अति-तापित भाप भोजन में ऊष्मा स्थानांतरण की दर को बढ़ा देती है, जिससे खाना तेज़ी से पकता है।</p> <p>ऊपर दिए गए कथनों में से कौन सा/से <b>सही है/हैं?</b></p>
Only II and III are correct	
केवल II और III सही हैं	
All I, II, and III are correct	
सभी I, II और III सही हैं	
Only I and II are correct	
केवल I और II सही हैं	
Only I and III are correct	
केवल I और III सही हैं	
Not Answered	

Q.No: 66	What is the name of the satellite launched by ISRO's GSLV-F09 that was a gift to SAARC nations? इसरो के जीएसएलवी-एफ09 द्वारा प्रक्षेपित उपग्रह का नाम क्या है जो सार्क(SAARC) देशों को उपहार था?
GSAT-9	
जीसैट-9	
GSAT-19	
जीसैट-19	
INSAT-3DR	
इनसैट-3डीआर	
IRNSS-1G	
आईआरएनएसएस-1जी	
Not Answered	

Q.No: 67	Which of the following is NOT TRUE about Tribhuvandas Patel? त्रिभुवनदास पटेल के बारे में निम्नलिखित में से कौन सा कथन सही नहीं है?
He was the founder of the Kaira Milk Union (Amul). वह कैरा मिल्क यूनियन (अमूल) के संस्थापक थे।	
Lok Sabha has passed a bill to setup Tribhuvan Sahkari University in Gujarat. लोकसभा ने गुजरात में त्रिभुवन सहकारी विश्वविद्यालय स्थापित करने के लिए एक बिल पारित कर दिया है।	
He was awarded Padma Vibhushan for his social service. उनकी समाज सेवा के लिए उन्हें पद्म विभूषण से सम्मानित किया गया था।	
He was awarded Ramon Magsaysay award for community leadership. उन्हें सामुदायिक नेतृत्व के लिए रेमन मैग्सेसे पुरस्कार से सम्मानित किया गया।	
Not Answered	

Q.No: 68	How did the administrative roles of rajas differ from those of zamindars under the Mughal system मुगल शासन व्यवस्था में राजाओं की प्रशासनिक भूमिकाएं जमींदारों से किस प्रकार भिन्न थीं?
Zamindars were subordinate tax officers under the rajas, appointed directly by the emperor. ज़मींदार राजाओं के अधीन अधीनस्थ कर अधिकारी होते थे, जिन्हें सम्राट द्वारा सीधे नियुक्त किया जाता था।	
Rajas and zamindars performed identical roles but differed in their religious affiliations. राजा और ज़मींदार एक जैसी भूमिका निभाते थे, लेकिन उनकी धार्मिक मान्यताएं भिन्न थीं।	
Rajas governed broader regions and held a higher status, while zamindars primarily managed land revenue collection. राजा व्यापक क्षेत्रों पर शासन करते थे और उच्च दर्जा रखते थे, जबकि ज़मींदार मुख्य रूप से भूमि राजस्व संग्रह का प्रबंधन करते थे।	
Zamindars exercised complete political control, whereas rajas held only ceremonial titles. ज़मींदारों के पास पूर्ण राजनीतिक नियंत्रण था, जबकि राजाओं के पास केवल औपचारिक उपाधियाँ थीं।	
Not Answered	

Q.No: 69	Read the following statements and choose the <b>correct</b> option: <b>Statement 1:</b> Karnataka has the highest elephant population among Southern States. <b>Statement 2:</b> A high number of juvenile elephant deaths in Karnataka are due to Elephant Endotheliotropic Herpesvirus (EEHV). निम्नलिखित कथनों को पढ़ें और सही विकल्प चुनें: <b>कथन 1:</b> दक्षिणी राज्यों में कर्नाटक में हाथियों की संख्या सबसे अधिक है। <b>कथन 2:</b> कर्नाटक में किशोर हाथियों की मृत्यु का एक बड़ा कारण एलिफेंट एंडोथेलियोट्रोपिक हर्पीसवायरस (EEHV) है।
Only Statement 1 is correct केवल कथन 1 सही है	
Only Statement 2 is correct केवल कथन 2 सही है	
Both Statements 1 and 2 are correct कथन 1 और 2 दोनों सही हैं	
Neither Statement 1 nor 2 is correct न तो कथन 1 और न ही 2 सही है	
Not Answered	

Q.No: 70	In the lac operon model, what is the primary role of the allolactose molecule? लैक ऑपेरॉन मॉडल में एलोलैक्टोज अणु की मुख्य भूमिका क्या होती है?
It functions as an inducer, binding to the repressor protein and inactivating it. यह एक प्रेरक के रूप में कार्य करता है, रिप्रेसर प्रोटीन से जुड़कर उसे निष्क्रिय कर देता है।	
It acts as a corepressor, binding with the repressor protein. यह एक को-रिप्रेसर के रूप में कार्य करता है और रिप्रेसर प्रोटीन से जुड़ता है।	
It binds to the promoter to initiate transcription. यह प्रमोटर से जुड़कर लिप्यांकन आरंभ करता है।	
It directly codes for the enzymes involved in lactose metabolism. यह सीधे लैक्टोज चयापचय में शामिल एंजाइमों का कोडन प्रदान करता है।	
Not Answered	



Q.No: 71

Match Column A (Denudational Processes) with Column B (Their Driving Forces/Energy):

Column A (Denudational Processes)	Column B (Their Driving Forces/Energy)
A. Weathering	1. kinetic Energy
B. Mass Movement	2.Gravitational / Molecular Stresses /Chemical Actions
C. Erosion and Transportation	3. Gravitational Force
D. Denudation (overall process)	4. External Forces acting on Earth surface

स्तम्भ A (विनाशकारी प्रक्रियाएँ) को स्तम्भ B (उनकी प्रेरक शक्तियाँ/ऊर्जा) से सुमेलित करें:

स्तंभ ए(विनाशात्मक प्रक्रियाएं)	स्तंभ बी (उनकी प्रेरक शक्तियाँ/ऊर्जा)
ए. अपक्षय	1. गतिज ऊर्जा
बी. जन आंदोलन	2.गुरुत्वाकर्षण / आणविक तनाव / रासायनिक क्रियाएं
सी. कटाव और परिवहन	3. गुरुत्वाकर्षण बल
डी. अनाच्छादन (समग्र प्रक्रिया)	4. पृथ्वी की सतह पर कार्य करने वाले बाह्य बल

A-2, B-3, C-1, D-4

ए-2, बी-3, सी-1, डी-4

A-2, B-1, C-3, D-4

ए-2, बी-1, सी-3, डी-4

A-4, B-3, C-2, D-1

ए-4, बी-3, सी-2, डी-1

A-1, B-2, C-3, D-4

ए-1, बी-2, सी-3, डी-4

Not Answered

Q.No: 72

Which entities are eligible to register under the FCRA?

विदेशी अंशदान (विनियमन) अधिनियम (FCRA) के अंतर्गत किन संस्थाओं को पंजीकरण की पात्रता प्राप्त है?

Political parties

राजनीतिक दल

Government departments

सरकारी विभाग

Only private companies

केवल निजी कंपनियाँ

Section 8 companies, trusts, and societies

धारा 8 कंपनियाँ, ट्रस्ट और समितियाँ

Not Answered

Q.No: 73

What evidence supports the Big Bang theory of universe origin?

ब्रह्मांड की उत्पत्ति के बिग बैंग सिद्धांत का समर्थन कौन सा साक्ष्य करता है?

Sunspot cycles

सूर्य कलंक चक्र

Redshift of galaxies

आकाशगंगाओं का लाल विस्थापन

Solar wind

सौर पवन

Q.No: 74	Who was the Chairman of the "Advisory Committee on Fundamental Rights, Minorities, and Tribal and Excluded Areas" in the Constituent Assembly? संविधान सभा में "मौलिक अधिकार, अल्पसंख्यक तथा जनजातीय एवं बहिष्कृत क्षेत्रों संबंधी सलाहकार समिति" के अध्यक्ष कौन थे?
Sardar Vallabhbhai Pate	
सरदार वल्लभभाई पटेल	
Jawaharlal Nehru	
जवाहरलाल नेहरू	
K.M. Munshi	
के.एम. मुंशी	
Dr. B.R. Ambedkar	
डॉ. बी.आर. अम्बेडकर	

Q.No: 75	Match the following Schedules of the Indian Constitution with their respective features: <table><tr><th>Column A (Schedule)</th><th>Column B (Feature)</th></tr><tr><td>1. First Schedule</td><td>a. Allocation of powers and responsibilities between Union and States</td></tr><tr><td>2. Third Schedule</td><td>b. Forms of Oaths or Affirmations</td></tr><tr><td>3. Fifth Schedule</td><td>c. Administration and control of Scheduled Areas and Tribes (excluding NE states)</td></tr><tr><td>4. Seventh Schedule</td><td>d. Names of the States and Union Territories and their territorial jurisdiction</td></tr></table> भारतीय संविधान की निम्नलिखित अनुसूचियों का उनकी संबंधित विशेषताओं से मिलान कीजिए: <table><tr><th>स्तंभ A (अनुसूची)</th><th>स्तंभ B (विशेषता)</th></tr><tr><td>1. प्रथम अनुसूची</td><td>a. संघ और राज्यों के बीच शक्तियों और उत्तरदायित्वों का आबंटन</td></tr><tr><td>2. तृतीय अनुसूची</td><td>b. शपथ या प्रतिज्ञान के प्रकार</td></tr><tr><td>3. पाँचवीं अनुसूची</td><td>c. अनुसूचित क्षेत्रों और जनजातियों का प्रशासन और नियंत्रण (पूर्वोत्तर राज्यों को छोड़कर)</td></tr><tr><td>4. सातवीं अनुसूची</td><td>d. राज्यों और केंद्र शासित प्रदेशों के नाम और उनका क्षेत्रीय अधिकार क्षेत्र</td></tr></table>	Column A (Schedule)	Column B (Feature)	1. First Schedule	a. Allocation of powers and responsibilities between Union and States	2. Third Schedule	b. Forms of Oaths or Affirmations	3. Fifth Schedule	c. Administration and control of Scheduled Areas and Tribes (excluding NE states)	4. Seventh Schedule	d. Names of the States and Union Territories and their territorial jurisdiction	स्तंभ A (अनुसूची)	स्तंभ B (विशेषता)	1. प्रथम अनुसूची	a. संघ और राज्यों के बीच शक्तियों और उत्तरदायित्वों का आबंटन	2. तृतीय अनुसूची	b. शपथ या प्रतिज्ञान के प्रकार	3. पाँचवीं अनुसूची	c. अनुसूचित क्षेत्रों और जनजातियों का प्रशासन और नियंत्रण (पूर्वोत्तर राज्यों को छोड़कर)	4. सातवीं अनुसूची	d. राज्यों और केंद्र शासित प्रदेशों के नाम और उनका क्षेत्रीय अधिकार क्षेत्र
Column A (Schedule)	Column B (Feature)																				
1. First Schedule	a. Allocation of powers and responsibilities between Union and States																				
2. Third Schedule	b. Forms of Oaths or Affirmations																				
3. Fifth Schedule	c. Administration and control of Scheduled Areas and Tribes (excluding NE states)																				
4. Seventh Schedule	d. Names of the States and Union Territories and their territorial jurisdiction																				
स्तंभ A (अनुसूची)	स्तंभ B (विशेषता)																				
1. प्रथम अनुसूची	a. संघ और राज्यों के बीच शक्तियों और उत्तरदायित्वों का आबंटन																				
2. तृतीय अनुसूची	b. शपथ या प्रतिज्ञान के प्रकार																				
3. पाँचवीं अनुसूची	c. अनुसूचित क्षेत्रों और जनजातियों का प्रशासन और नियंत्रण (पूर्वोत्तर राज्यों को छोड़कर)																				
4. सातवीं अनुसूची	d. राज्यों और केंद्र शासित प्रदेशों के नाम और उनका क्षेत्रीय अधिकार क्षेत्र																				
1-b, 2-d, 3-a, 4-c																					
1-b, 2-d, 3-a, 4-c																					
1-a, 2-c, 3-b, 4-d																					
1-a, 2-c, 3-b, 4-d																					
1-c, 2-a, 3-d, 4-b																					
1-c, 2-a, 3-d, 4-b																					
1-d, 2-b, 3-c, 4-a																					
1-d, 2-b, 3-c, 4-a																					

Q.No: 76	Consider the following statements comparing the <b>Simon Commission (1927)</b> and the <b>Nehru Report (1928)</b> : 1. The Simon Commission was boycotted by Indian political parties primarily due to its all-Indian composition. 2. The Nehru Report proposed complete independence for India as its immediate objective. Which of the above <b>is/are correct?</b>  <b>साइमन कमीशन (1927) और नेहरू रिपोर्ट (1928)</b> की तुलना करते हुए निम्नलिखित कथनों पर विचार कीजिए: 1. साइमन कमीशन का भारतीय राजनीतिक दलों द्वारा मुख्यतः इसके अखिल भारतीय स्वरूप के कारण बहिष्कार किया गया था। 2. नेहरू रिपोर्ट ने भारत के लिए पूर्ण स्वतंत्रता को अपने तात्कालिक उद्देश्य के रूप में प्रस्तावित किया था। उपर्युक्त में से कौन सा/से <b>सही है/हैं?</b>
Neither 1 nor 2	
न तो 1 और न ही 2	
1 only	
केवल 1	
2 only	
केवल 2	
Both 1 and 2	
1 और 2 दोनों	

Q.No: 77	Name the state in whichThe Bhitarkanika Mangroves are located?  भीतरकनिका मैन्ग्रोव वन किस राज्य में स्थित हैं?
Odisha	
ओडिशा	
Andhra Pradesh	
आंध्र प्रदेश	
Tamil Nadu	
तमिलनाडु	
West Bengal	
पश्चिम बंगाल	
Not Answered	

Q.No: 78	Which of the following pairs is <b>correctly</b> matched?  निम्नलिखित में से कौन सा युग्म <b>सही</b> सुमेलित है?
Mission Shakti – Startup grants for rural men	
मिशन शक्ति - ग्रामीण पुरुषों के लिए स्टार्टअप अनुदान	
PM-AAGY – Railway safety in backward areas	
पीएम-एएजीवाई - पिछड़े क्षेत्रों में रेलवे सुरक्षा	
Swadesh Darshan 2.0 – Theme-based tourism circuits	
स्वदेश दर्शन 2.0 – थीम-आधारित पर्यटन सर्किट	
PM-JANMAN – Urban housing for tribals	
पीएम-जनमन - आदिवासियों के लिए शहरी आवास	

Q.No: 79	Which of the below statements is/is <b>correct</b> ? <b>Statement 1:</b> India supports connectivity through the North-South Transport Corridor. <b>Statement 2:</b> The corridor strengthens India’s trade with the Pacific Islands.  नीचे दिए गए कथनों में से कौन सा <b>सही है/हैं?</b> <b>कथन 1:</b> भारत उत्तर-दक्षिण परिवहन गलियारे के माध्यम से संपर्क का समर्थन करता है। <b>कथन 2:</b> यह गलियारा प्रशांत द्वीप समूह के साथ भारत के व्यापार को मजबूत करता है।
Only Statement 2 is correct	
केवल कथन 2 सही है	
Only Statement 1 is correct	
केवल कथन 1 सही है	
Both 1 and 2 are correct	
1 और 2 दोनों सही हैं	
Neither 1 nor 2 is correct	



न तो 1 और न ही 2 सही है

Not Answered

Q.No: 80 With whose participation did the Anushilan group join forces when the Bengal Congress broke up into two factions after the death of CR Das?

सी.आर. दास की मृत्यु के बाद जब बंगाल कांग्रेस दो गुटों में टूट गई तो अनुशीलन समूह ने किसकी भागीदारी से हाथ मिलाया?

Ganesh Ghosh

गणेश घोष

Surya Sen

सूर्य सेन

JM Sengupta

जेएम सेनगुप्ता

Subhash Bose

सुभाष बोस

Not Answered

Q.No: 81 The "emoluments, allowances, and privileges of constitutional officeholders" are governed under which Schedule of the Indian Constitution?

"संवैधानिक पदाधिकारियों की उपलब्धियां, भत्ते और विशेषाधिकार" भारतीय संविधान की किस अनुसूची के अंतर्गत शासित होते हैं?

Fifth Schedule

पाँचवीं अनुसूची

Seventh Schedule

सातवीं अनुसूची

Eleventh Schedule

ग्यारहवीं अनुसूची

Second Schedule

दूसरी अनुसूची

Not Answered

Q.No: 82 What was the main occupation of the majority of the Indian population during the period immediately after independence (around 1947)?

स्वतंत्रता के तुरंत बाद (लगभग 1947) की अवधि के दौरान भारतीय जनसंख्या के बहुमत का मुख्य व्यवसाय क्या था?

Agriculture

कृषि

Information Technology

सूचना प्रौद्योगिकी

Manufacturing

विनिर्माण

Services

सेवाएं

Q.No: 83 How many total medals did India win at the International Shooting Sport Federation (ISSF) Rifle/Pistol World Cup 2023 held in Bhopal?

भोपाल में आयोजित अंतर्राष्ट्रीय निशानेबाजी खेल महासंघ (आईएसएसएफ) राइफल/पिस्टल विश्व कप 2023 में भारत ने कुल कितने पदक जीते?

6

6

5

5

7

7

8

8

Not Answered

Q.No: 84	The Vesara style of temple architecture is a combination of which two styles? वेसर शैली किस दो स्थापत्य शैलियों का सम्मिलन है?
Gandhara and French	
गंधार और फ्रांसीसी प्रभाव	
Nagara and Gothic	
नागर और गोथिक शैली	
Dravidian and Nagara	
द्रविड़ और नागर शैलियों का मिश्रण	
Mughal and Dravidian	
मुगल एवं द्रविड़ शैली का सम्मिश्रण	

Q.No: 85	Whom Hiuen Tsang called "one of the four lights of world", who's also called Indian Einstein? ह्वेन त्सांग ने किसे "विश्व के चार प्रकाशों में से एक" कहा था, जिसे भारतीय आइंस्टीन भी कहा जाता है?
Charak	
चरक	
Vasumitra	
वसुमित्र	
Ashvaghosha	
अश्वघोष	
Nagarjuna	
नागार्जुन	
Not Answered	

Q.No: 86	Which of the following sectors contributes the most to India's GDP? भारत की सकल घरेलू उत्पाद (GDP) में सर्वाधिक योगदान देने वाला क्षेत्र कौन-सा है?
Agriculture	
कृषि	
Manufacturing	
विनिर्माण	
Services	
सेवाएँ	
Mining	
खनन	

Q.No: 87	Earth remote sensing satellites (EOS) are primarily designed to: पृथ्वी सुदूर संवेदन उपग्रह (EOS) मुख्यतः निम्नलिखित के लिए डिज़ाइन किए गए हैं:
Drill into Earth's crust for mineral samples	
खनिज नमूनों के लिए पृथ्वी की पपड़ी में ड्रिल करना	
Monitor weather, land use, and environmental changes on Earth	
पृथ्वी पर मौसम, भूमि उपयोग और पर्यावरण परिवर्तनों पर नज़र रखें	
Build underground transport systems	
भूमिगत परिवहन प्रणालियाँ बनाएँ	
Study the internal structure of Earth using seismic waves	
भूकंपीय तरंगों का उपयोग करके पृथ्वी की आंतरिक संरचना का अध्ययन करें	
Not Answered	

Q.No: 88	What is the maximum time limit for completing the trial of a case under the POCSO Act? पॉक्सो अधिनियम के अंतर्गत किसी मामले के न्यायिक निपटान की अधिकतम समय-सीमा क्या है?
6 months	

छह महीने
3 years
तीन वर्ष
2 years
दो वर्ष
1 year
एक वर्ष
Not Answered

Q.No: 89	Which discretionary power allows a Governor to reserve a bill passed by the state legislature for the consideration of the President? कौन सी विवेकाधीन शक्ति राज्यपाल को राज्य विधानमंडल द्वारा पारित विधेयक को राष्ट्रपति के विचारार्थ आरक्षित करने की अनुमति देती है?
To send a report to the President for the imposition of President's Rule. राष्ट्रपति शासन लागू करने के लिए राष्ट्रपति को रिपोर्ट भेजना।	
To reserve a bill for the President's consideration. किसी विधेयक को राष्ट्रपति के विचारार्थ आरक्षित करना।	
To grant pardon in certain cases. कुछ मामलों में क्षमा प्रदान करना।	
To summon, prorogue, and dissolve the state legislative assembly. राज्य विधान सभा को बुलाना, स्थगित करना और भंग करना।	
Not Answered	

Q.No: 90	Which of the following statement is <b>incorrect</b> regarding global indices as of July 2025? जुलाई 2025 तक वैश्विक सूचकांकों के संबंध में निम्नलिखित में से कौन सा कथन <b>गलत</b> है?
The World Happiness Report 2024 highlights social support, life expectancy, and GDP per capita as key happiness factors. विश्व प्रसन्नता रिपोर्ट 2024 में सामाजिक समर्थन, जीवन प्रत्याशा और प्रति व्यक्ति सकल घरेलू उत्पाद को प्रसन्नता के प्रमुख कारकों के रूप में रेखांकित किया गया है।	
AQI consistently above 200 signals general health risks and requires urgent policy action. AQI का लगातार 200 से ऊपर रहना सामान्य स्वास्थ्य जोखिम का संकेत है और इसके लिए तत्काल नीतिगत कार्रवाई की आवश्यकता है।	
Despite being discontinued, the Ease of Doing Business report remains influential for investors assessing startup procedures. बंद होने के बावजूद, व्यवसाय करने में आसानी संबंधी रिपोर्ट स्टार्टअप प्रक्रियाओं का मूल्यांकन करने वाले निवेशकों के लिए प्रभावशाली बनी हुई है।	
A rise in GNI per capita alone can significantly improve HDI, even with falling life expectancy and education. प्रति व्यक्ति सकल राष्ट्रीय आय में वृद्धि से ही मानव विकास सूचकांक में उल्लेखनीय सुधार हो सकता है, भले ही जीवन प्रत्याशा और शिक्षा में गिरावट हो रही हो।	
Not Answered	

Q.No: 91	What is the purpose of the 'Beti Bachao Beti Padhao' scheme? 'बेटी बचाओ बेटी पढ़ाओ' योजना का उद्देश्य क्या है?
Saving and educating the girl child बालिकाओं को बचाना और शिक्षित करना।	
Women's health insurance महिला स्वास्थ्य बीमा	
Employment for women महिलाओं के लिए रोजगार	
Financial support for girl's marriage लड़की की शादी के लिए वित्तीय सहायता	

Q.No: 92	Which of the following is the correct sequence in the life cycle of a star like the Sun? सूर्य जैसे तारे के जीवन चक्र में निम्नलिखित में से कौन सा क्रम सही है?
Protostar → White Dwarf → Red Giant → Main Sequence प्रोटोस्टार → श्वेत बौना → लाल दानव → मुख्य अनुक्रम	
Nebula → Red Giant → Main Sequence → White Dwarf	

नेबुला → लाल दानव → मुख्य अनुक्रम → सफेद बौना
Main Sequence → Red Giant → White Dwarf
मुख्य अनुक्रम → लाल दानव → सफेद बौना
Red Giant → Protostar → White Dwarf
लाल दानव → प्रोटोस्टार → सफेद बौना
Not Answered

Q.No: 93	A conductor of length L and resistance R is cut into two equal halves. These two halves are then connected in parallel. Find the equivalent resistance of this parallel combination?  लंबाई L और प्रतिरोध R वाले एक चालक को दो बराबर भागों में काटा जाता है। फिर इन दोनों भागों को समान्तर क्रम में जोड़ा जाता है। इस समान्तर संयोजन का तुल्य प्रतिरोध ज्ञात कीजिए।
R/4	
R/4	
R	
R	
R/2	
R/2	
R/8	
R/8	
Not Answered	

Q.No: 94	Which of the following states has the lowest population in India, according to the 2011 Census of India?  भारत की 2011 की जनगणना के अनुसार, निम्नलिखित में से किस राज्य की जनसंख्या भारत में सबसे कम है?
Maharashtra	
महाराष्ट्र	
Odisha	
ओडिशा	
Punjab	
पंजाब	
Madhya Pradesh	
मध्य प्रदेश	

Q.No: 95	During the period of 1947-1990, India's trade policy was largely characterized by:  1947-1990 की अवधि के दौरान भारत की व्यापार नीति मुख्यतः निम्नलिखित थी:
An inward-looking strategy emphasizing import substitution and protection of domestic industries.	
आयात प्रतिस्थापन और घरेलू उद्योगों के संरक्षण पर जोर देने वाली एक अंतर्मुखी रणनीति।	
A policy of free trade with minimal government intervention in international transactions.	
अंतर्राष्ट्रीय लेन-देन में न्यूनतम सरकारी हस्तक्षेप के साथ मुक्त व्यापार की नीति।	
A liberal import policy aimed at providing consumers with a wide range of goods.	
उदार आयात नीति का उद्देश्य उपभोक्ताओं को विभिन्न प्रकार की वस्तुएं उपलब्ध कराना है।	
An aggressive export-oriented strategy focused on global competitiveness.	
वैश्विक प्रतिस्पर्धा पर केन्द्रित एक आक्रामक निर्यात-मुख्य रणनीति।	
Not Answered	

Q.No: 96	Which of the following is a characteristic feature of meristematic tissues in plants?  निम्नलिखित में से कौन सा पौधों में मेरिस्टेमेटिक ऊतकों की एक विशिष्ट विशेषता है?
Large vacuoles and thick cell walls	
बड़ी रिक्तिकाएँ और मोटी कोशिका भित्ति	
Absence of nucleus and presence of lignified walls	
नाभिक की अनुपस्थिति और लिग्निफाइड दीवारों की उपस्थिति	
Actively dividing cells with dense cytoplasm and prominent nuclei	

सघन कोशिकाद्रव्य और प्रमुख केन्द्रक वाली सक्रिय रूप से विभाजित होने वाली कोशिकाएं
Dead cells that provide mechanical support
मृत कोशिकाएं जो यांत्रिक सहायता प्रदान करती हैं
Not Answered

Q.No: 97	What does the 'invisible hand' concept, as proposed by Adam Smith, primarily signify? एडम स्मिथ द्वारा प्रस्तावित 'अदृश्य हाथ' अवधारणा मुख्यतः क्या दर्शाती है?
Control of monopolies	
एकाधिकार पर नियंत्रण	
Government control in markets	
बाजारों में सरकारी नियंत्रण	
Market equilibrium achieved via self-interest	
स्वार्थ के माध्यम से प्राप्त बाजार संतुलन	
International trade regulation	
अंतर्राष्ट्रीय व्यापार विनियमन	
Not Answered	

Q.No: 98	Which of the following High Courts has jurisdiction over more than one state? निम्नलिखित में से किस उच्च न्यायालय का क्षेत्राधिकार एक से अधिक राज्यों पर है?
Kerala High Court	
केरल उच्च न्यायालय	
Guwahati High Court	
गुवाहाटी उच्च न्यायालय	
Delhi High Court	
दिल्ली उच्च न्यायालय	
Patna High Court	
पटना उच्च न्यायालय	
Not Answered	

Q.No: 99	Which of the following correctly matches the population growth phase in India with its key characteristic? निम्नलिखित में से कौन सा भारत में जनसंख्या वृद्धि चरण को उसकी प्रमुख विशेषता से सही ढंग से मेल खाता है?
Phase IV (Post-1981) – Sudden increase in fertility rate due to migration	
चरण IV (1981 के बाद) – प्रवास के कारण प्रजनन दर में अचानक वृद्धि	
Phase III (1951–1981) – Population explosion caused by falling death rate and high fertility	
चरण III (1951-1981) – मृत्यु दर में गिरावट और उच्च प्रजनन क्षमता के कारण जनसंख्या विस्फोट	
Phase I (1901–1921) – Rapid population explosion due to low mortality and high fertility	
चरण I (1901-1921) – कम मृत्यु दर और उच्च प्रजनन क्षमता के कारण तीव्र जनसंख्या विस्फोट	
Phase II (1921–1951) – High mortality rate and declining birth rate	
चरण II (1921-1951) – उच्च मृत्यु दर और घटती जन्म दर	
Not Answered	

Q.No: 100	Which of the following is an erosional landform created primarily by river action? निम्नलिखित में से कौन सा मुख्य रूप से नदी क्रिया द्वारा निर्मित अपरदनात्मक भू-आकृति है?
Moraine	
मोरेन	
Delta	
डेल्टा	
Gorge	
गॉर्ज	
Levee	
लेवी	



PART - C (English Language and Comprehension)

Q.No: 101	Which sentence contains a word that is spelled incorrectly?
The actors had a final <b>rehearsel</b> before the big show.	
The soldier jumped out of the plane using a <b>parachute.</b>	
The students gathered <b>together</b> in the assembly hall.	
She carefully placed the vase on the <b>shelf.</b>	

Q.No: 102	<p>Read the following passage carefully and answer the questions that follow by selecting the most appropriate option from the given alternatives.</p> <p>In the age of endless options—from streaming services to social media platforms—modern individuals face what psychologists call “decision fatigue.” Unlike earlier generations who had limited choices, today’s youth are constantly required to decide: what to watch, whom to follow, what to share, and how to respond. While freedom of choice is often celebrated, too many choices can lead to stress, dissatisfaction, and even paralysis. Ironically, abundance can become overwhelming. Algorithms, designed to predict preferences, often narrow exposure rather than broaden it, creating digital bubbles. People may feel in control, yet their choices are subtly shaped by unseen patterns. Over time, the constant need to choose can drain mental energy, leaving individuals anxious or indifferent. True digital freedom may lie not in limitless options, but in mindful engagement and setting personal boundaries. Recognising when to choose—and when to step back—could be the new wisdom of the connected age.</p> <p>What is the main issue discussed in the passage?</p>
Rise of social media trends	
Overuse of mobile apps	
Stress caused by excessive digital choices	
Lack of internet literacy	

Q.No: 103	<p>Read the following passage carefully and answer the questions that follow by selecting the most appropriate option from the given alternatives.</p> <p>In the age of endless options—from streaming services to social media platforms—modern individuals face what psychologists call “decision fatigue.” Unlike earlier generations who had limited choices, today’s youth are constantly required to decide: what to watch, whom to follow, what to share, and how to respond. While freedom of choice is often celebrated, too many choices can lead to stress, dissatisfaction, and even paralysis. Ironically, abundance can become overwhelming. Algorithms, designed to predict preferences, often narrow exposure rather than broaden it, creating digital bubbles. People may feel in control, yet their choices are subtly shaped by unseen patterns. Over time, the constant need to choose can drain mental energy, leaving individuals anxious or indifferent. True digital freedom may lie not in limitless options, but in mindful engagement and setting personal boundaries. Recognising when to choose—and when to step back—could be the new wisdom of the connected age.</p> <p>What does the author imply about algorithms?</p>
They always give better choices	
They expand one’s interests	
They limit exposure to diverse content	
They reduce online ads	

Q.No: 104	<p>Read the following passage carefully and answer the questions that follow by selecting the most appropriate option from the given alternatives.</p> <p>In the age of endless options—from streaming services to social media platforms—modern individuals face what psychologists call “decision fatigue.” Unlike earlier generations who had limited choices, today’s youth are constantly required to decide: what to watch, whom to follow, what to share, and how to respond. While freedom of choice is often celebrated, too many choices can lead to stress, dissatisfaction, and even paralysis. Ironically, abundance can become overwhelming. Algorithms, designed to predict preferences, often narrow exposure rather than broaden it, creating digital bubbles. People may feel in control, yet their choices are subtly shaped by unseen patterns. Over time, the constant need to choose can drain mental energy, leaving individuals anxious or indifferent. True digital freedom may lie not in limitless options, but in mindful engagement and setting personal boundaries. Recognising when to choose—and when to step back—could be the new wisdom of the connected age.</p> <p>What paradox is presented in the passage?</p>
Choice leads to control but also exhaustion	
Technology helps only the rich	
More apps mean less productivity	
Less data brings more security	
Not Answered	

Q.No: 105	<p>Read the following passage carefully and answer the questions that follow by selecting the most appropriate option from the given alternatives.</p> <p>In the age of endless options—from streaming services to social media platforms—modern individuals face what psychologists call “decision fatigue.” Unlike earlier generations who had limited choices, today’s youth are constantly required to decide: what to watch, whom to follow, what to share, and how to respond. While freedom of choice is often celebrated, too many choices can lead to stress, dissatisfaction, and even paralysis. Ironically, abundance can become overwhelming. Algorithms, designed to predict preferences, often narrow exposure rather than broaden it, creating digital bubbles. People may feel in control, yet their choices are subtly shaped by unseen patterns. Over time, the constant need to choose can drain mental energy, leaving individuals anxious or indifferent. True digital freedom may lie not in limitless options, but in mindful engagement and setting personal boundaries. Recognising when to choose—and when to step back—could be the new wisdom of the connected age.</p> <p>According to the author, what may be a solution?</p>
Faster internet plans	
Reducing social media apps	
Mindful engagement and limits	
Following more influencers	

Q.No: 106	<p>Read the following passage carefully and answer the questions that follow by selecting the most appropriate option from the given alternatives.</p> <p>In the age of endless options—from streaming services to social media platforms—modern individuals face what psychologists call “decision fatigue.” Unlike earlier generations who had limited choices, today’s youth are constantly required to decide: what to watch, whom to follow, what to share, and how to respond. While freedom of choice is often celebrated, too many choices can lead to stress, dissatisfaction, and even paralysis. Ironically, abundance can become overwhelming. Algorithms, designed to predict preferences, often narrow exposure rather than broaden it, creating digital bubbles. People may feel in control, yet their choices are subtly shaped by unseen patterns. Over time, the constant need to choose can drain mental energy, leaving individuals anxious or indifferent. True digital freedom may lie not in limitless options, but in mindful engagement and setting personal boundaries. Recognising when to choose—and when to step back—could be the new wisdom of the connected age.</p> <p>What is the tone of the passage?</p>
Sarcastic	
Cautionary	
Indifferent	
Aggressive	
Not Answered	



Q.No: 107	<p>Read the passage and answer the questions:</p> <p>Much of the discussion in this book is about biases of intuition. However, the focus on biases does not mean that intuition is always wrong—far from it. Most of the time, the quick judgments of our intuitive mind, what I call System 1, are accurate enough to help us navigate the world. This system operates automatically and quickly, with little or no effort.</p> <p>On the other hand, System 2 is the slower, more deliberate mode of thinking. It allocates attention to effortful mental activities, such as solving complex problems or evaluating logical arguments. System 2 is more methodical and rational, but it is also lazier—it prefers to endorse the intuitions of System 1 rather than question them.</p> <p>This division of labour works well most of the time, but it also creates predictable errors. Because System 1 is prone to biases and snap judgments, we often make decisions that are not as rational as we believe. Understanding these two systems can help us recognize when we are relying too much on intuition and when we need to engage in more deliberate thinking.</p> <p>Identify the sentence with correct subject-verb agreement:</p>
	The quick judgments of our intuitive mind, what I call System 1, is accurate enough to help us navigate the world.
	This division of labor work well most of the time, but it also creates predictable errors.
	Understanding these two systems can helps us recognize when we are relying too much on intuition.
	System 2 allocates attention to effortful mental activities, such as solving complex problems or evaluating logical arguments.
	Not Answered

Q.No: 108	<p>Read the passage and answer the questions:</p> <p>Much of the discussion in this book is about biases of intuition. However, the focus on biases does not mean that intuition is always wrong—far from it. Most of the time, the quick judgments of our intuitive mind, what I call System 1, are accurate enough to help us navigate the world. This system operates automatically and quickly, with little or no effort.</p> <p>On the other hand, System 2 is the slower, more deliberate mode of thinking. It allocates attention to effortful mental activities, such as solving complex problems or evaluating logical arguments. System 2 is more methodical and rational, but it is also lazier—it prefers to endorse the intuitions of System 1 rather than question them.</p> <p>This division of labour works well most of the time, but it also creates predictable errors. Because System 1 is prone to biases and snap judgments, we often make decisions that are not as rational as we believe. Understanding these two systems can help us recognize when we are relying too much on intuition and when we need to engage in more deliberate thinking.</p> <p>Choose the sentence that correctly uses a relative pronoun:</p>
	System 1 is the intuitive mode of thinking, who operates automatically and quickly.
	The biases, which influence our judgments, often lead to predictable errors.
	Understanding the two systems, whom have different roles, is crucial for decision-making.
	The effortful mental activities whose System 2 performs include solving complex problems.
	Not Answered

Q.No: 109	<p>Read the passage and answer the questions:</p> <p>Much of the discussion in this book is about biases of intuition. However, the focus on biases does not mean that intuition is always wrong—far from it. Most of the time, the quick judgments of our intuitive mind, what I call System 1, are accurate enough to help us navigate the world. This system operates automatically and quickly, with little or no effort.</p> <p>On the other hand, System 2 is the slower, more deliberate mode of thinking. It allocates attention to effortful mental activities, such as solving complex problems or evaluating logical arguments. System 2 is more methodical and rational, but it is also lazier—it prefers to endorse the intuitions of System 1 rather than question them.</p> <p>This division of labour works well most of the time, but it also creates predictable errors. Because System 1 is prone to biases and snap judgments, we often make decisions that are not as rational as we believe. Understanding these two systems can help us recognize when we are relying too much on intuition and when we need to engage in more deliberate thinking.</p> <p>What is the meaning of the word "deliberate" in the sentence:</p> <p>"System 2 is the slower, more deliberate mode of thinking."</p>
Accidental	
Careful and intentional	
Quick and effortless	
Biased	
Not Answered	

Q.No: 110	<p>Read the passage and answer the questions:</p> <p>Much of the discussion in this book is about biases of intuition. However, the focus on biases does not mean that intuition is always wrong—far from it. Most of the time, the quick judgments of our intuitive mind, what I call System 1, are accurate enough to help us navigate the world. This system operates automatically and quickly, with little or no effort.</p> <p>On the other hand, System 2 is the slower, more deliberate mode of thinking. It allocates attention to effortful mental activities, such as solving complex problems or evaluating logical arguments. System 2 is more methodical and rational, but it is also lazier—it prefers to endorse the intuitions of System 1 rather than question them.</p> <p>This division of labour works well most of the time, but it also creates predictable errors. Because System 1 is prone to biases and snap judgments, we often make decisions that are not as rational as we believe. Understanding these two systems can help us recognize when we are relying too much on intuition and when we need to engage in more deliberate thinking.</p> <p>Choose the best synonym for the word "endorse" in the sentence:</p> <p>"System 2 is more methodical and rational, but it is also lazier—it prefers to endorse the intuitions of System 1 rather than question them."</p>
Approve	
Reject	
Criticize	
Delay	

Q.No: 111	<p>Read the passage and answer the questions:</p> <p>Much of the discussion in this book is about biases of intuition. However, the focus on biases does not mean that intuition is always wrong—far from it. Most of the time, the quick judgments of our intuitive mind, what I call System 1, are accurate enough to help us navigate the world. This system operates automatically and quickly, with little or no effort.</p> <p>On the other hand, System 2 is the slower, more deliberate mode of thinking. It allocates attention to effortful mental activities, such as solving complex problems or evaluating logical arguments. System 2 is more methodical and rational, but it is also lazier—it prefers to endorse the intuitions of System 1 rather than question them.</p> <p>This division of labour works well most of the time, but it also creates predictable errors. Because System 1 is prone to biases and snap judgments, we often make decisions that are not as rational as we believe. Understanding these two systems can help us recognize when we are relying too much on intuition and when we need to engage in more deliberate thinking.</p> <p>According to the passage, what is one drawback of System 1 thinking?</p>
	It always leads to incorrect decisions.
	It requires too much mental effort.
	It can be prone to biases and snap judgments.
	It completely replaces System 2 in decision-making.
	Not Answered

Q.No: 112	<p>In the following passage, some words have been omitted. Read the passage carefully and choose the most appropriate option from the given alternatives to fill in each blank. Mark your answer for each question.</p> <p>As technology continues to advance, space exploration is no longer limited to astronauts and scientists. In the coming decades, space could become a place for engineers, architects, doctors, and even artists. The idea of working beyond Earth, once considered science fiction, is slowly becoming a realistic (1)_____. Many countries have already started investing in training programs that prepare students for space-related fields. These programs not only focus on science, but also build problem-solving and leadership skills. Working in space will bring its own challenges—long durations, isolation, and technical failures will require (2)_____ preparation. Yet, the chance to be part of something bigger than oneself is what draws many young minds. With space tourism rising and private companies joining the race, the job market is expected to (3)_____. However, to succeed in this field, one must stay curious, adaptable, and (4)_____. In the future, reaching for the stars might not be a dream, but a (5)_____</p> <p>(1)</p>
	ambition
	option
	mystery
	illusion

Q.No: 113	<p>In the following passage, some words have been omitted. Read the passage carefully and choose the most appropriate option from the given alternatives to fill in each blank. Mark your answer for each question.</p> <p>As technology continues to advance, space exploration is no longer limited to astronauts and scientists. In the coming decades, space could become a place for engineers, architects, doctors, and even artists. The idea of working beyond Earth, once considered science fiction, is slowly becoming a realistic (1)_____. Many countries have already started investing in training programs that prepare students for space-related fields. These programs not only focus on science, but also build problem-solving and leadership skills. Working in space will bring its own challenges—long durations, isolation, and technical failures will require (2)_____ preparation. Yet, the chance to be part of something bigger than oneself is what draws many young minds. With space tourism rising and private companies joining the race, the job market is expected to (3)_____. However, to succeed in this field, one must stay curious, adaptable, and (4)_____. In the future, reaching for the stars might not be a dream, but a (5)_____</p> <p>(2)</p>
	casual
	emotional
	intense
	frequent
	Not Answered



Q.No: 114 In the following passage, some words have been omitted. Read the passage carefully and choose the most appropriate option from the given alternatives to fill in each blank. Mark your answer for each question.

As technology continues to advance, space exploration is no longer limited to astronauts and scientists. In the coming decades, space could become a place for engineers, architects, doctors, and even artists. The idea of working beyond Earth, once considered science fiction, is slowly becoming a realistic (1)\_\_\_\_\_. Many countries have already started investing in training programs that prepare students for space-related fields. These programs not only focus on science, but also build problem-solving and leadership skills. Working in space will bring its own challenges—long durations, isolation, and technical failures will require (2)\_\_\_\_\_ preparation. Yet, the chance to be part of something bigger than oneself is what draws many young minds. With space tourism rising and private companies joining the race, the job market is expected to (3)\_\_\_\_\_. However, to succeed in this field, one must stay curious, adaptable, and (4)\_\_\_\_\_. In the future, reaching for the stars might not be a dream, but a (5)\_\_\_\_\_

(3)

collapse

expand

decline

compete

Q.No: 115 In the following passage, some words have been omitted. Read the passage carefully and choose the most appropriate option from the given alternatives to fill in each blank. Mark your answer for each question.

As technology continues to advance, space exploration is no longer limited to astronauts and scientists. In the coming decades, space could become a place for engineers, architects, doctors, and even artists. The idea of working beyond Earth, once considered science fiction, is slowly becoming a realistic (1)\_\_\_\_\_. Many countries have already started investing in training programs that prepare students for space-related fields. These programs not only focus on science, but also build problem-solving and leadership skills. Working in space will bring its own challenges—long durations, isolation, and technical failures will require (2)\_\_\_\_\_ preparation. Yet, the chance to be part of something bigger than oneself is what draws many young minds. With space tourism rising and private companies joining the race, the job market is expected to (3)\_\_\_\_\_. However, to succeed in this field, one must stay curious, adaptable, and (4)\_\_\_\_\_. In the future, reaching for the stars might not be a dream, but a (5)\_\_\_\_\_

(4)

reliable

silent

proud

stubborn

Q.No: 116 In the following passage, some words have been omitted. Read the passage carefully and choose the most appropriate option from the given alternatives to fill in each blank. Mark your answer for each question.

As technology continues to advance, space exploration is no longer limited to astronauts and scientists. In the coming decades, space could become a place for engineers, architects, doctors, and even artists. The idea of working beyond Earth, once considered science fiction, is slowly becoming a realistic (1)\_\_\_\_\_. Many countries have already started investing in training programs that prepare students for space-related fields. These programs not only focus on science, but also build problem-solving and leadership skills. Working in space will bring its own challenges—long durations, isolation, and technical failures will require (2)\_\_\_\_\_ preparation. Yet, the chance to be part of something bigger than oneself is what draws many young minds. With space tourism rising and private companies joining the race, the job market is expected to (3)\_\_\_\_\_. However, to succeed in this field, one must stay curious, adaptable, and (4)\_\_\_\_\_. In the future, reaching for the stars might not be a dream, but a (5)\_\_\_\_\_

(5)

mistake

memory

reality

direction

Q.No: 117	Find the incorrect part of the sentence: He divided the sweets between his five friends.
He divided	
between his five friends	
No error	
the sweets	

Q.No: 118	Select the option that expresses the given sentence in Direct to Indirect Speech. He said, "I have completed the task."
He said that he has completed the task.	
He said that he was completing the task.	
He said that he completed the task.	
He said that he had completed the task.	

Q.No: 119	What does the idiom 'To leave no stone unturned' mean?
Search thoroughly	
Avoid effort	
Relax completely	
Ignore issues	

Q.No: 120	Choose the correct direct speech form of the following sentence.  He asked if I had been aware of the policies of the company.
He said, "Did you be aware of the policies of the company?"	
He said, "Were you aware of the policies of the company?"	
He said, "Was you aware of the policies of the company?"	
He said, "Were you aware of the policies of the company?"	

Q.No: 121	Select the most appropriate option to improve the bold part of the sentence. He is one of those players who <b>has scored</b> the most goals.
have scored	
had been scoring	
scores	
had scored	

Q.No: 122	Arrange the sentence parts: (A) met (B) his friend (C) at the station (D) Rohit
DCBA	
DBAC	
DACB	

Q.No: 123	Transform the following sentence into active voice.  All the structures built in that area had been demolished due to encroachment.
They had demolished all the structures build in that area due to encroachment.	
They had demolished all the structures that were built in that area due to encroachment.	
They had demolished all the structures built in that area due to encroachment.	
They had demolished all the structures built in that area due to encroachment by the people.	

Q.No: 124	Select the most appropriate option to fill in the blank. He speaks English ___ than I do.
best	
better	
more good	
good	

Q.No: 125	In the following question, a sentence has been given in Indirect Speech. Choose the correct Direct Speech form.  The climatologist said that if global temperatures kept rising, sea levels would threaten major coastal cities.
The climatologist said, "If global temperatures kept rising, sea levels will threaten major coastal cities."	
The climatologist said, "If global temperatures had kept rising, sea levels would have threatened major coastal cities."	
The climatologist said, "If global temperatures kept rising, sea levels would threaten major coastal cities."	
The climatologist said, "If global temperatures keep rising, sea levels threaten major coastal cities."	

Q.No: 126	What does the idiom 'On cloud nine' mean?
Lazy	
Extremely happy	
Very angry	
Confused	

Q.No: 127	Which sentence contains a word that is spelled incorrectly?
The weather forecast mentioned a change in meterological patterns.	
He is passionate about anthropology and human cultures.	
The scientist wrote a paper on marine biology and its ecosystems.	
She is studying zoology at the university to become a biologist.	

Q.No: 128	Select the option that expresses the given sentence in Direct to Indirect Speech. He said, "I don't like spicy food."
He said that he hadn't liked spicy food.	

He said that he likes spicy food.
He said that he didn't like spicy food.
He said that he doesn't like spicy food.

Q.No: 129	Select the synonym of <b>Perfunctory</b> .
Diligent	
Careless	
Painstaking	
Detailed	
Not Answered	

Q.No: 130	Choose the option that completes the sentence using the correct spelling.  The newly fallen snow _____ transformed the landscape.
magically	
magically	
magickelly	
majicelly	

Q.No: 131	In the following question, the first and the last parts of the sentence/passage are numbered 1 and 6. The rest of the sentence/passage is split into four parts — P, Q, R, and S. These four parts are not given in their proper order. Read the sentence/passage and find the most logical order of the parts between 1 and 6.  I visited a zoo last weekend.P: The lions were resting under trees.Q: I saw many wild animals there.R: Monkeys were swinging on branches.S: The elephants were eating sugarcane.6. It was a fun and learning experience.
QSPR	
PQSR	
PRSQ	
QPSR	

Q.No: 132	Select the option that expresses the given sentence in Direct to Indirect Speech. She said to me, "Would you like some coffee?"
She asked that I would like some coffee.	
She asked me if I would like some coffee.	
She asked me would I like some coffee.	
She offered me some coffee.	

Q.No: 133	Select the option that expresses the given sentence in Direct Speech. She said that she was learning French.
She said, "I learn French."	
She said, "I am learning French."	
She said, "I was learning French."	



She said, "I have learned French."

Q.No: 134

Select the most appropriate option to improve the bold part of the sentence.  
He insisted **to go** home.

going on

upon going

that he goes

on going

Q.No: 135

Select the correct passive form of the given sentence.  
"They might be repairing the engine now."

The engine might be repaired now.

The engine may be repairing now.

The engine might be being repaired now.

The engine might repaired now.

Q.No: 136

Find the incorrect part of the sentence:  
Neither of the two brothers are trustworthy.

Neither of the two brothers

are

trustworthy

No error

Not Answered

Q.No: 137

In the following question, the first and the last parts of the sentence/passage are numbered 1 and 6. The rest of the sentence/passage is split into four parts — P, Q, R, and S. These four parts are not given in their proper order. Read the sentence/passage and find the most logical order of the parts between 1 and 6.  
  
A triangle has three sides.P: The angles can be equal or different.Q: It is one of the basic shapes.R: Every triangle has three angles.S: The sum of angles is always 180 degrees.6. Triangles are important in geometry.

QPRS

PRSQ

RPQS

QRPS

Q.No: 138

Choose the antonym of 'Lax'.

Reliable

Stack

Careless

Loose

Q.No: 139	Rearrange the parts of this sentence: (A) rising inflation (B) causes difficulties (C) for middle-class families (D) everywhere
BCAD	
BACD	
<b>ABCD</b>	
BACD	

Q.No: 140	Arrange the sentence parts: (A) every week (B) we (C) play (D) cricket
<b>BACD</b>	
BADC	
DACB	
CADB	

Q.No: 141	Choose the one which can be substituted for the given sentence. A person who writes books
Publisher	
Editor	
Orator	
<b>Author</b>	

Q.No: 142	In the following question, the first and the last parts of the sentence/passage are numbered 1 and 6. The rest of the sentence/passage is split into four parts — P, Q, R, and S. These four parts are not given in their proper order. Read the sentence/passage and find the most logical order of the parts between 1 and 6.  Solar energy is gaining popularity worldwide. P: It is available in abundance. Q: This makes it a sustainable option. R: Unlike fossil fuels, it doesn't emit harmful gases. S: Also, it reduces dependency on non-renewable sources. 6. Hence, governments are investing in solar technology.
PRSQ	
QPSR	
<b>RSPQ</b>	
PQRS	

Q.No: 143	In the following question, the first and the last parts of the sentence/passage are numbered 1 and 6. The rest of the sentence/passage is split into four parts — P, Q, R, and S. These four parts are not given in their proper order. Read the sentence/passage and find the most logical order of the parts between 1 and 6.  Science fiction fuels technological imagination. P: It inspires young minds to innovate. Q: Many past inventions were once fictional ideas. R: It encourages thinking beyond limits. S: Stories often explore future societies. 6. Thus, sci-fi has real-world influence.
PQRS	
SRQP	
<b>QPRS</b>	
RQPS	
Not Answered	

Q.No: 144	Choose the part of the sentence that contains an error: The child is afraid from the dark.
The child is	
the dark	
No error	
afraid from	

Q.No: 145	Choose the part of the sentence that contains an error: You should avail of every opportunity.
every opportunity	
No error	
avail of	
You should	

Q.No: 146	Select the option that expresses the given sentence in Direct Speech. She told us that she had not seen the movie.
She said, "I didn't see the movie."	
She said, "I haven't seen the movie."	
She said, "I had not seen the movie."	
She said, "She hadn't seen the movie."	

Q.No: 147	Select the most appropriate homonym. He will <b>bat</b> for his friend's innocence.
Criticize	
Play cricket	
Hit	
support	

Q.No: 148	Select the option that expresses the given sentence in Direct to Indirect Speech. She said, "Can I ask a question?"
She asked whether she could ask a question.	
She asked whether she might ask a question.	
She said whether she could ask a question.	
She asked whether she can ask a question.	

Q.No: 149	Select the correct active form of the given sentence: "The assignment work has been successfully finished ahead of time by Pragna."
Pragna has finished her assignment work ahead of time.	
Pragna has successfully finished her assignment ahead of time.	
Pragna have successfully finished her assignment work ahead of time.	

Pragna has successfully finished her assignment work ahead of time.

Q.No: 150	Rearrange the parts of this sentence: (A) before the heavy rains (B) the villagers (C) repaired the damaged bridge (D) with the help of officials
DACB	
BACD	
<b>BCAD</b>	
ABCD	

Q.No: 151	Choose the antonym of 'commendable':
Notable	
<b>Blameworthy</b>	
Laudable	
Admirable	
<b>Not Answered</b>	

Q.No: 152	Select the most appropriate option to improve the bold part of the sentence. I am used <b>to eat</b> late at night.
for eating	
eating	
<b>to eating</b>	
in eating	

Q.No: 153	Select the correct passive form of the given sentence. "The director should announce the results today."
The results should being announced.	
<b>The results should be announced today.</b>	
The results should be announce today.	
The results should have been announced.	

Q.No: 154	Select the synonym of <b>Exaggerate</b> .
<b>Amplify</b>	
Minimize	
Suppress	
Understate	

Q.No: 155	Arrange the sentence parts: (A) the headmaster (B) for his punctuality (C) praised (D) the student
ABCD	
ADCB	

BDCA

ACBD

Q.No: 156    Select the synonym of **Gratify**.

Satisfy

Insult

Displease

Annoy

Q.No: 157    Rearrange the parts of this sentence:  
(A) for higher education (B) many students (C) prefer to go abroad (D) these days

ABCD

BDAC

BADC

BACD

Q.No: 158    In the following question, the first and the last parts of the sentence/passage are numbered 1 and 6. The rest of the sentence/passage is split into four parts — P, Q, R, and S. These four parts are not given in their proper order. Read the sentence/passage and find the most logical order of the parts between 1 and 6.  
Ravi opened his new geometry box. P: It had a ruler, compass, and protractor. Q: He used it in his maths class. R: He showed it to his friends. S: It was made of metal and looked shiny. 6. He liked his new box very much.

SRPQ

PSRQ

PRQS

PRSQ

Not Answered

Q.No: 159    Select the most appropriate option to improve the bold part of the sentence.  
**Hardly I had entered** the room when the phone rang.

Hardly had I entered

Hardly was I entering

I had hardly entered

I hardly had entered

Q.No: 160    Select the most appropriate option to fill in the blank.  
His actions are incompatible \_\_\_\_ his words.

to

for

with

by

Not Answered

Q.No: 161	Select the most appropriate homonym. The judge will <b>pass</b> the verdict.
Cross	
Fail	
Shift	
Announce	

Q.No: 162	Choose the antonym of 'assert':
Deny	
Maintain	
Proclaim	
Declare	
Not Answered	

Q.No: 163	Choose the correct meaning of Idiom "Flog a dead horse".
Beat an opponent unfairly	
Repeat a settled argument	
Chase an impossible goal	
Waste time on a lost cause	

Q.No: 164	Select the synonym of 'Carnal'.
Demand	
Greed	
Jealousy	
Earthly	
Not Answered	

Q.No: 165	Select the correct active form. "Was your phone being charged by someone?"
Has someone charged your phone?	
Did someone charge your phone?	
Was someone charging your phone?	
Is someone charging your phone?	

Q.No: 166	Choose the correct sequence to form a meaningful sentence: (A) has a long (B) India (C) and rich (D) cultural history
BDCA	
BCAD	
BADC	
BADC	

Q.No: 167	Choose the one which can be substituted for the given sentence. The murder of a king
Regicide	
Patricide	
Fratricide	
Homicide	
Not Answered	

Q.No: 168	Select the most appropriate option to fill in the blank. The ___ of the movie was unexpected.
ends	
ending	
ended	
end	

Q.No: 169	Select the option that expresses the given sentence in Direct to Indirect Speech. She said, "I had eaten breakfast."
She said that she ate breakfast.	
She said that she would have eaten breakfast.	
She said that she had eaten breakfast.	
She said that she has eaten breakfast.	

Q.No: 170	Select the correct active form of the given sentence. "The dining hall was being thoroughly cleaned by the workers."
The workers were thoroughly cleaned the dinning hall.	
The workers were thoroughly cleaning the dinning hall.	
The workers had thoroughly cleaning the dinning hall.	
The workers was thoroughly cleaning the dinning hall.	

Q.No: 171	Select the correct passive form of the given sentence. "The judge is hearing the final arguments."
The final arguments were heard.	
The final arguments has heard.	
The final arguments was being heard.	
The final arguments are being heard by the judge.	

Q.No: 172	Choose the one which can be substituted for the given sentence. A political disorder and absence of government
Plutocracy	
Monarchy	



Anarchy
Oligarchy

Q.No: 173	What does the idiom ‘Barking up the wrong tree’ mean?
Apologizing	
Praising someone	
Accusing wrongly	
Succeeding quickly	

Q.No: 174	Select the most appropriate option to fill in the blank. They arrived ___ the airport on time.
over	
at	
in	
on	

Q.No: 175	Select the most appropriate option to improve the bold part of the sentence. It is high time you <b>leave the room</b> .
have left the room	
had left the room	
left the room	
leaves the room	

Q.No: 176	Choose the antonym of ‘eminent’:
Prominent	
Celebrated	
Distinguished	
Obscure	

Q.No: 177	Select the most appropriate homonym. The king sat on a <b>throne</b> .
Crown	
Chair	
Rule	
Sword	

Q.No: 178	Select the most appropriate option to improve the bold part of the sentence. This session is an improvement <b>rather the previous one</b> .
best	
more good	

very better

over

Q.No: 179    Identify the part containing a grammatical or structural error:  
The father with his sons are arriving soon.

with his sons

No error

The father

are arriving soon

Not Answered

Q.No: 180    What is the one-word substitute for "A poem of mourning"?

Ballad

Ode

Elegy

Sonnet

Q.No: 181    Select the correct passive form of the given sentence.  
"I will complete the work tomorrow."

The work will have completed by me.

The work will be completed by me tomorrow.

The work shall completed by me.

The work is completed tomorrow by me.

Q.No: 182    Choose the correct meaning of the idiom:  
'Cut no ice'

Have no effect

Create trouble

Be sharp

Stop something

Not Answered

Q.No: 183    Find the incorrect part of the sentence:  
The judge ordered the prisoner to hung till death.

to hung till death

No error

The judge ordered

the prisoner

Q.No: 184	Choose the correct direct speech form of the following sentence.  Simran said that she had been writing a letter to the principal.
Simran said, "I have writing a letter to the principal."	
Simran said, "I have been writing a letter to the principal."	
Simran said, "I was being writing a letter to the principal."	
Simran said, "I was written a letter to the principal."	

Q.No: 185	Select the most appropriate option to fill in the blank. The patient was devoid ____ any hope of recovery.
in	
with	
of	
at	

Q.No: 186	In the following question, the first and the last parts of the sentence/passage are numbered 1 and 6. The rest of the sentence/passage is split into four parts — P, Q, R, and S. These four parts are not given in their proper order. Read the sentence/passage and find the most logical order of the parts between 1 and 6.  Email has changed modern communication. P: It is faster than traditional letters. Q: Instant messaging is also gaining popularity. R: Emails allow file sharing and formal contact. S: However, they may lack personal touch. 6. Choosing the right medium depends on context.
PRSQ	
PQSR	
RPSQ	
QPRS	
Not Answered	

Q.No: 187	What does the idiom ‘To grasp at straws’ mean?
To win easily	
To try desperate measures	
To show courage	
To make careful decisions	
Not Answered	

Q.No: 188	Select the most appropriate option to fill in the blank. She was credited ____ inventing the device.
for	
with	
by	
to	
Not Answered	

Q.No: 189	<p>In the following question, the first and the last parts of the sentence/passage are numbered 1 and 6. The rest of the sentence/passage is split into four parts — P, Q, R, and S. These four parts are not given in their proper order. Read the sentence/passage and find the most logical order of the parts between 1 and 6.</p> <p>Computers help us in many ways. P: Writing reports is easier. Q: Data is stored safely. R: Meetings happen online. S: Calculations are done fast. 6. Offices depend on them daily.</p>
PRSQ	
QRPS	
PQRS	
PQSR	
Not Answered	

Q.No: 190	<p>Transform the following sentence into active voice:</p> <p>Were you instructed by them how to fill in the form?</p>
Did you instruct them how to fill in the form?	
Was he informed how to fill in the form by them?	
Were they informing you how to fill in the form?	
Did they instruct you how to fill in the form?	

Q.No: 191	<p>Spot the misspelt word.</p>
Acheived	
Accessible	
Committee	
Accommodate	
Not Answered	

Q.No: 192	<p>Select the most appropriate option to improve the bold part of the sentence.</p> <p>The teacher asked <b>that who</b> was absent.</p>
that whom	
which student	
who	
whose	

Q.No: 193	<p>Select the most appropriate option to fill in the blank.</p> <p>He congratulated me ____ my success.</p>
of	
of	
at	
on	

Q.No: 194	<p>In the following question, a sentence has been given in Indirect Speech. Choose the correct Direct Speech form.</p> <p>The analyst stated that inflation could have been controlled if monetary policies had been revised earlier.</p>
-----------	---

The analyst stated, "Inflation could have been controlled if monetary policies had been revised earlier."

The analyst stated, "Inflation could be controlled if monetary policies were revised earlier."

The analyst stated, "Inflation had been controlled if monetary policies had been revised earlier."

The analyst stated, "Inflation can be controlled if monetary policies are revised earlier."

Q.No: 195    Choose the correctly spelt word:

Entreprenure

Entroprenure

Entrepreneur

Enterprenuer

Q.No: 196    Select the correct active form.  
"Why was the match postponed by the organizers?"

Why have the organizers postponed the match?

Why do the organizers postpone the match?

Why did the organizers postpone the match?

Why are the organizers postponing the match?

Q.No: 197    Arrange the sentence parts:  
(A) read (B) the instructions (C) before filling (D) carefully

DACB

BACD

BCAD

BDCA

Q.No: 198    Select the most appropriate homonym.  
The old man could barely **hear**.

Hair

lister

Smell

See

Q.No: 199    Select the most appropriate option to fill in the blank.  
The boy was punished \_\_\_\_ his disobedience.

in

for

to

at

Q.No: 200	Find the misspelt word.
Beligerant	
excellent	
existence	
Belligerent	

