

Multi Tasking Non Technical Staff and Havaladar CBIC and CBN Examination 2024

Exam Date	23/10/2024
Exam Time	12:30 PM - 2:30 PM
Subject	MTS Non Tech Havaladar CBIC and CBN Examination 2024

Section : Numerical and Mathematical Ability

Q.1 A hemispherical bowl is made of 1 cm thick copper.. The inner radius of the bowl is 6 cm. Find the cost to paint the outer curved surface area of the bowl, if the paint cost is ₹2 per cm²? (Use $\pi = \frac{22}{7}$)

- Ans
- ☒ 1. Rs.616
 - ☐ 2. Rs.552
 - ☐ 3. Rs.586
 - ☐ 4. Rs.604

Q.2 If the HCF of 156 and 96 is expressible in the form of $156 \times 12 + 96A$, then the value of A is:

- Ans
- ☐ 1. 19.735
 - ☐ 2. -19.735
 - ☐ 3. 19.375
 - ☒ 4. -19.375

Q.3 A jar contains a mixture with 45% syrup. A portion of this mixture is replaced by another mixture containing 30% syrup. The new mixture is found to have 34% syrup. What is the ratio in which these mixtures should be mixed to obtain the new mixture?

- Ans
- ☐ 1. 3 : 14
 - ☒ 2. 4 : 11
 - ☐ 3. 5 : 13
 - ☐ 4. 7 : 10

Q.4 A student saves an average of ₹4,000 per month for the first three months. How much should be saved (in ₹) on an average per month over the next 9 months to average ₹4,375 per month over the whole year?

- Ans
- ☐ 1. 4187.5
 - ☒ 2. 4500
 - ☐ 3. 4000
 - ☐ 4. 4200

Q.5 The average weight of a family of five members (in kg) whose weights are 40 kg, 49 kg, 56 kg, 66 kg and 36 kg is:

- Ans
- ☐ 1. 50.4
 - ☒ 2. 49.4
 - ☐ 3. 51.4
 - ☐ 4. 48.4

Q.6 The speed of a boat in still water is 12 km/h and the stream flows at a speed of 3 km/h. The distance travelled in the boat downstream in 24 minutes is:

- Ans
- ☐ 1. 4 km
 - ☒ 2. 6 km
 - ☐ 3. 5 km
 - ☐ 4. 7 km

Q.7 Find the simple interest (in ₹) on ₹3000 as a sum borrowed at 8% per year rate of interest for 2 years.

- Ans
- ☐ 1. 440
 - ☐ 2. 520
 - ☒ 3. 480
 - ☐ 4. 420

- Q.8 The given table shows the number of employees in three organisations during three years.

Year Organisation	2015	2016	2017
L	1421	1230	1652
M	1459	1825	1740
N	1620	1125	1235

What is the respective ratio between the total number of employees in organisations L and M together in 2015, and the total number of employees in organisations M and N together in 2017?

- Ans
- ☐ 1. 295 : 376
 - ☐ 2. 595 : 576
 - ☐ 3. 376 : 295
 - ☒ 4. 576 : 595

- Q.9 A shopkeeper offered following four different discount schemes for buyers on an item.

- A. Two successive discounts of 8%
- B. A discount of 11% followed by a discount of 5%.
- C. Successive discounts of 13% and 3%
- D. A discount of 16%.

If Rajiv wants to purchase the item from this shop at minimum price, he should opt for the discount scheme:

- Ans
- ☒ 1. D
 - ☐ 2. A
 - ☐ 3. B
 - ☐ 4. C

- Q.10 The speed of a car is 81 km/hr. The distance covered by the car in 24 seconds is:

- Ans
- ☐ 1. 280 m
 - ☒ 2. 540 m
 - ☐ 3. 560 m
 - ☐ 4. 270 m

- Q.11 Reena buys an iron for ₹900 and sells it at a loss of 12%. What is the selling price of the iron?

- Ans
- ☐ 1. ₹825
 - ☐ 2. ₹763
 - ☒ 3. ₹792
 - ☐ 4. ₹658

- Q.12 The price of an article is reduced by 40% and its sale is increased by 80%. Find the net effect on revenue.

- Ans
- ☐ 1. 10% increase
 - ☐ 2. 10% decrease
 - ☒ 3. 8% increase
 - ☐ 4. 8% decrease

- Q.13 Find the simple interest (in ₹) on ₹2000 as a sum borrowed at 9% per year rate of interest for 4 years.

- Ans
- ☐ 1. 660
 - ☐ 2. 680
 - ☒ 3. 720
 - ☐ 4. 760

Q.14 The given bar graph shows the imports and exports (in ₹ crores) of steel of a country during the years 2013 to 2017.



What is the percentage of the total imports for the years 2013, 2015 and 2017 to the exports for all the years taken together (correct to one decimal place)?

- Ans
- ☒ 1. 52.4%
 - ☐ 2. 54.7%
 - ☐ 3. 53.8%
 - ☐ 4. 51.6%

Q.15 If the average of the first 15 multiples of 9 is x, then x is:

- Ans
- ☒ 1. 72
 - ☐ 2. 114
 - ☐ 3. 68
 - ☐ 4. 78

Q.16 The expenses of painting the inner curved surface of a cylindrical vessel 20 m deep is ₹4,400. If the painting rate is ₹40 per m², find the total surface area (in m²) of the vessel correct to two places of decimals. (used $\pi = \frac{22}{7}$).

- Ans
- ☒ 1. 114.81 m²
 - ☐ 2. 116.81 m²
 - ☐ 3. 115.81 m²
 - ☐ 4. 117.81 m²

Q.17 The price ratio between wheat and rice is 9 : 11, whereas the household consumption ratio is 11 : 13. Calculate the ratio of expenses on wheat and rice.

- Ans
- ☐ 1. 7 : 13
 - ☐ 2. 13 : 7
 - ☒ 3. 13 : 9
 - ☐ 4. 9 : 13

Q.18 Find the gain percentage, given that Nidhi sold her scooter for ₹80442 gaining $\frac{1}{6}$ th of the selling price.

- Ans
- ☐ 1. 35%
 - ☐ 2. 15%
 - ☒ 3. 20%
 - ☐ 4. 10%

Q.19 What will be the ratio of simple interest earned by a certain amount at the same rate of interest for 12 years and that for 15 years?

- Ans
- ☐ 1. 3 : 4
 - ☐ 2. 2 : 5
 - ☐ 3. 2 : 3
 - ☒ 4. 4 : 5

Q.20 A metallic sphere with a radius of 35 cm is melted and subsequently transformed into several small solid cones, each having a diameter of 14 cm and a height of 4 cm. How many cones are formed as a result of this process?

- Ans
- ☐ 1. 825
 - ☐ 2. 850
 - ☒ 3. 875
 - ☐ 4. 900

Section : Reasoning Ability and Problem Solving

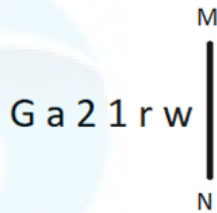
Q.1 What should come in place of the question mark (?) in the given series based on the English alphabetical order?
JLF, KOI, LRL, MUO, ?

- Ans
- ☒ 1. NXR
 - ☐ 2. OYR
 - ☐ 3. MXT
 - ☐ 4. NRY

Q.2 In a certain code language, 'MOBILE' is coded as '789410' and 'PINK' is coded as '2358'. How is 'I' coded in the given language?

- Ans
- ☐ 1. 5
 - ☒ 2. 8
 - ☐ 3. 3
 - ☐ 4. 2

Q.3 Select the correct mirror image of the given figure when the mirror is placed at MN as shown below.



- Ans
- ☒ 1. w r l 2 1 s o
 - ☐ 2. M r 2 1 s o
 - ☐ 3. w r l 2 e o
 - ☐ 4. M r l 2 s G

Q.4 In a certain code language, 'BUYS' is coded as '5173' and 'YOLK' is coded as '6458'. What is the code for 'Y' in the given code language?

- Ans
- ☐ 1. 7
 - ☐ 2. 8
 - ☐ 3. 6
 - ☒ 4. 5

Q.5 10 is related to 99 following a certain logic. Following the same logic, 14 is related to 195. To which of the following is 22 related, following the same logic?

(NOTE : Operations should be performed on the whole numbers, without breaking down the numbers into its constituent digits. E.g. 13 – Operations on 13 such as adding / subtracting / multiplying, etc., to 13 can be performed. Breaking down 13 into 1 and 3 and then performing mathematical operations on 1 and 3 is not allowed.)

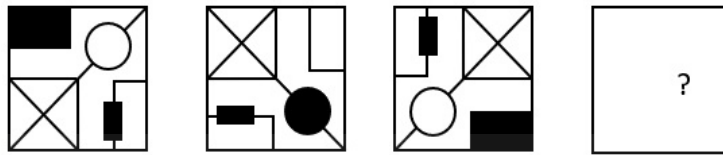
- Ans
- ☐ 1. 453
 - ☒ 2. 483
 - ☐ 3. 473
 - ☐ 4. 463

Q.6 Which two signs should be interchanged to make the following equation correct?

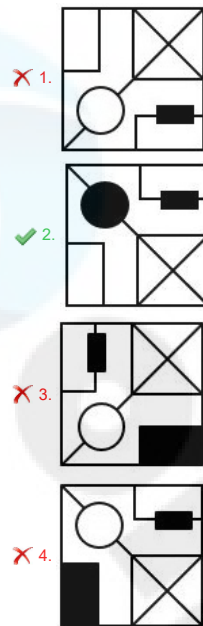
$$14 + 18 - 6 \times 15 \div 24 = 35$$

- Ans
- ☒ 1. - and ÷
 - ☐ 2. ÷ and ×
 - ☐ 3. - and +
 - ☐ 4. + and ×

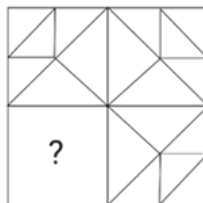
Q.7 Identify the figure given in the options that when put in place of the question mark (?) will logically complete the series.



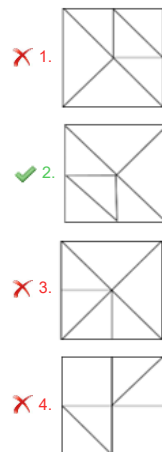
Ans



Q.8 Select the option figure that will replace the question mark (?) in the figure given below to complete the pattern.



Ans



Q.9 A, B, C, D, E, F, and G are sitting around a circular table, facing the centre (but not necessarily in the same order). Only 2 people sit between G and A when counted from the right of G. Only 2 people sit between E and D when counted from the right of E. E is an immediate neighbour of A. Only 2 people sit between B and C when counted from the left of C. What is the position of F with respect to B?

- Ans
- ✗ 1. 2nd to the right
 - ✓ 2. 2nd to the left
 - ✗ 3. 3rd to the left
 - ✗ 4. 3rd to the right

Q.10 What will come in the place of the question mark (?) in the following equation if '-' and '+' are interchanged and '+' and 'x' are interchanged?

$$7 + 5 \div 4 + 5 \div 36 - 4 \times 7 = ?$$

- Ans
- ✗ 1. 31
 - ✓ 2. 13
 - ✗ 3. 53
 - ✗ 4. 15

Q.11 Six students Amit, Shivam, Dinesh, Kamlesh, Nihar and Roshan are sitting around a circular table, facing the centre (but not necessarily in the same order). Amit is sitting to the immediate right of Shivam. Dinesh is sitting second to the right of Shivam. Nihar is an immediate neighbour of both Dinesh and Roshan. Who is sitting to the immediate right of Roshan?

- Ans
- ✓ 1. Kamlesh
 - ✗ 2. Shivam
 - ✗ 3. Amit
 - ✗ 4. Nihar

Q.12 PUQV is related to RWSX in a certain way based on the English alphabetical order. In the same way, JOKP is related to LQMR. To which of the following is MRNS related, following the same logic?

- Ans
- ✗ 1. TOUP
 - ✓ 2. OTPU
 - ✗ 3. TOPU
 - ✗ 4. OTUP

Q.13 In a certain code language, 'find this clue' is written as 'ak dh fk' and 'clue for you' is written as 'sg fk bo'. How is 'clue' written in the given language?

- Ans
- ✗ 1. dh
 - ✓ 2. fk
 - ✗ 3. ak
 - ✗ 4. sg

Q.14 Select the figure from the given options, which when put in place of the question mark (?) will logically complete the series.



Ans

- ✗ 1. □ - △ +
- ✗ 2. ○ △ - +
- ✗ 3. + △ - □
- ✓ 4. ≠ - △ ■

Q.15 In a certain code language, 'BASE' is coded as '2416' and 'SOUP' is coded as '3719'. What is the code for 'S' in the given code language?

- Ans
- ✗ 1. 6
 - ✓ 2. 1
 - ✗ 3. 3
 - ✗ 4. 2

Q.16 JA 88 is related to OF 77 in a certain way. In the same way, DT 55 is related to IY 44. To which of the following is LH 33 related following the same logic?

- Ans
- ✓ 1. QM 22
 - ✗ 2. XD 77
 - ✗ 3. NU 25
 - ✗ 4. OS 22

Q.17 What should come in place of the question mark (?) in the given series?

13 21 33 49 ? 93

- Ans
- ✓ 1. 69
 - ✗ 2. 82
 - ✗ 3. 74
 - ✗ 4. 79

Q.18 Given below are two sets of numbers. In each set of numbers, a certain mathematical operation on the first number results in the second number. Which of the options follows the same operation as given in the question?
(NOTE: Operations should be performed on the whole numbers, without breaking down the numbers into its constituent digits. E.g. 13 – Operations on 13 such as adding/subtracting/multiplying etc. to 13 can be performed. Breaking down 13 into 1 and 3 and then performing mathematical operations on 1 and 3 is not allowed.)
(21, 10)
(87, 43)

- Ans
- ☒ 1. (55, 21)
 - ☒ 2. (27, 13)
 - ☒ 3. (25, 9)
 - ☒ 4. (18, 7)

Q.19 Read the given statements and conclusions carefully. Assuming that the information given in the statements is true, even if it appears to be at variance with commonly known facts, decide which of the given conclusions logically follow(s) from the statements.

Statements:
No crow is a parrot.
No parrot is sparrow.

Conclusions:
(I) No crow is a sparrow.
(II) No parrot is a crow.

- Ans
- ☒ 1. Only conclusion I follows
 - ☒ 2. Both conclusions I and II follow
 - ☒ 3. Neither conclusion I nor II follows
 - ☒ 4. Only conclusion II follows

Q.20 Read the given statements and conclusions carefully. Assuming that the information given in the statements is true, even if it appears to be at variance with commonly known facts, decide which of the given conclusions logically follow(s) from the statements.

Statements:
• All lakes are rivers.
• All rivers are dams.

Conclusions:
(I) At least some dams are lakes.
(II) All rivers are lakes.

- Ans
- ☒ 1. Only conclusion (I) follows
 - ☒ 2. Neither conclusion (I) nor (II) follows
 - ☒ 3. Both conclusions (I) and (II) follow
 - ☒ 4. Only conclusion (II) follows

Section : General Awareness

Q.1 The famous novel 'The house of blue mangoes' is written by:

- Ans
- ☒ 1. Anees Salim
 - ☒ 2. David Davidar
 - ☒ 3. Shashi Tharoor
 - ☒ 4. Romila Thapar

Q.2 What is the name of the German Chancellor who visited India in February 2023?

- Ans
- ☒ 1. Angela Merkel
 - ☒ 2. Willy Brandt
 - ☒ 3. Olaf Scholz
 - ☒ 4. Wilhem Steinberg

Q.3 Which of the following statements are correct postulates of Dalton's atomic theory?

- A. All matter is made up of atoms. These atoms participate in chemical reactions.
- B. Atoms might be created or destroyed during a chemical reaction.
- C. Atoms of different elements vary in mass and chemical properties.
- D. Compounds are combination of atoms in the ratio of whole or fractional numbers.
- E. A compound will always have constant relative number and kind of atoms.

- Ans
- ☒ 1. B, D, E
 - ☒ 2. B, C, D
 - ☒ 3. A, C, E
 - ☒ 4. A, B, D

Q.4 Atmospheric temperature usually decreases with altitude, but sometimes this phenomenon gets reversed in the troposphere. This phenomenon is known as _____.

- Ans
- ☒ 1. Temperature Convection
 - ☒ 2. Temperature Inversion
 - ☒ 3. Global Warming
 - ☒ 4. Adiabatic Lapse Rate

Q.5 The Tunga and Bhadra are tributaries of which river?

- Ans
- ☒ 1. Krishna
 - ☒ 2. Godavari
 - ☒ 3. Tapi
 - ☒ 4. Narmada

Q.6	When did India declare itself a Sovereign, Democratic and Republic state with the adoption of the Constitution?
Ans	<input checked="" type="checkbox"/> 1. 15 August 1947 <input checked="" type="checkbox"/> 2. 2 October 1949 <input checked="" type="checkbox"/> 3. 14 November 1952 <input checked="" type="checkbox"/> 4. 26 January 1950
Q.7	Diwan-i-Am, containing the marble canopy ornamented with beautiful panels of pietra dura work, is a part of which monument?
Ans	<input checked="" type="checkbox"/> 1. Red Fort <input checked="" type="checkbox"/> 2. Bibi ka Makbara <input checked="" type="checkbox"/> 3. Humayun Tomb <input checked="" type="checkbox"/> 4. Taj Mahal
Q.8	As per the World Happiness Index 2023, which of the following countries secured the highest rank?
Ans	<input checked="" type="checkbox"/> 1. Nepal <input checked="" type="checkbox"/> 2. Sri Lanka <input checked="" type="checkbox"/> 3. Bangladesh <input checked="" type="checkbox"/> 4. Pakistan
Q.9	Who among the following founded his Kuchipudi Art Academy at Madras in 1963?
Ans	<input checked="" type="checkbox"/> 1. Raja Reddy <input checked="" type="checkbox"/> 2. Kamalakar Kameshwar Rao <input checked="" type="checkbox"/> 3. Vempati Chinna Satyam <input checked="" type="checkbox"/> 4. Lakshmi Narayan Shastri
Q.10	The famous Sanskrit grammar book 'Mahabhasya' was written by:
Ans	<input checked="" type="checkbox"/> 1. Bharatmuni <input checked="" type="checkbox"/> 2. Vedvyas <input checked="" type="checkbox"/> 3. Patanjali <input checked="" type="checkbox"/> 4. Panini
Q.11	Who among the following Portuguese travellers visited the Vijayanagar empire during the reign of Krishnadevaraya?
Ans	<input checked="" type="checkbox"/> 1. Nicolo de Conti <input checked="" type="checkbox"/> 2. Athanasius Nikitin <input checked="" type="checkbox"/> 3. Domingo Paes <input checked="" type="checkbox"/> 4. Ludovico de Varthema
Q.12	The 2011 census was the _____ official survey conducted in India.
Ans	<input checked="" type="checkbox"/> 1. 18 th <input checked="" type="checkbox"/> 2. 16 th <input checked="" type="checkbox"/> 3. 14 th <input checked="" type="checkbox"/> 4. 15 th
Q.13	As on February 2024, who among the following is the Union Minister for Ports, Shipping and Waterways?
Ans	<input checked="" type="checkbox"/> 1. Prahlad Joshi <input checked="" type="checkbox"/> 2. Sarbananda Sonowal <input checked="" type="checkbox"/> 3. Hardeep Singh Puri <input checked="" type="checkbox"/> 4. Giraj Singh
Q.14	If the Glycemic Index (GI) of a specific food is from 70 to 100, then the type of that food is:
Ans	<input checked="" type="checkbox"/> 1. Extremely low-GI food <input checked="" type="checkbox"/> 2. High-GI food <input checked="" type="checkbox"/> 3. Medium-GI food <input checked="" type="checkbox"/> 4. Low-GI food
Q.15	In the final match of the Asian Games _____ held in Jakarta, Indonesia, India secured gold by defeating South Korea with a score of 2-1 in football.
Ans	<input checked="" type="checkbox"/> 1. 1958 <input checked="" type="checkbox"/> 2. 1970 <input checked="" type="checkbox"/> 3. 1962 <input checked="" type="checkbox"/> 4. 1966
Q.16	'Alarippu' is the first dance item of which of the following Indian classical dance forms?
Ans	<input checked="" type="checkbox"/> 1. Odissi <input checked="" type="checkbox"/> 2. Bharatanatyam <input checked="" type="checkbox"/> 3. Kathakali <input checked="" type="checkbox"/> 4. Kuchipudi
Q.17	As per the Constitution of India, every Governor, before entering upon his office, will make and subscribe an oath in the presence of the _____.
Ans	<input checked="" type="checkbox"/> 1. President <input checked="" type="checkbox"/> 2. Chief Minister <input checked="" type="checkbox"/> 3. Chief Justice of India <input checked="" type="checkbox"/> 4. Chief Justice of the High Court

Q.18 Which of the following characteristics was used by Aristotle to classify animals?

- Ans
- ☐ 1. Specialised organs
 - ☒ 2. Habitat
 - ☐ 3. Photosynthesis
 - ☐ 4. Types of body cells

Q.19 The 'Secular' word in the Indian Constitution was added to the constitution by _____ Constitutional Amendment Act.

- Ans
- ☒ 1. 42nd
 - ☐ 2. 46th
 - ☐ 3. 48th
 - ☐ 4. 44th

Q.20 Hariharan was conferred the Padma Shri in 2004 for his contribution to which of the following fields?

- Ans
- ☐ 1. Medicine
 - ☐ 2. Civil Service
 - ☐ 3. Sports
 - ☒ 4. Art - Music

Q.21 Which of the following is a crop grown in Rabi season in India?

- Ans
- ☐ 1. Rice
 - ☒ 2. Wheat
 - ☐ 3. Maize
 - ☐ 4. Soyabean

Q.22 In badminton, how high above the ground is the net positioned at the centre?

- Ans
- ☐ 1. 5.5 feet
 - ☒ 2. 5 feet
 - ☐ 3. 4 feet
 - ☐ 4. 6 feet

Q.23 In 1905, Hindus and Muslims tied 'Rakhi' on each other's hands to show their unity and their protest against the _____.

- Ans
- ☐ 1. Partition of Punjab
 - ☐ 2. Rowlatt Act
 - ☒ 3. Partition of Bengal
 - ☐ 4. Morley-Minto Reforms

Q.24 Which of the following are recognised as final goods while estimating the gross domestic product in India?

- a. Wheat purchased for making roti in a house
- b. Wheat purchased for making roti in a hotel
- c. Tea bags used to make tea in a house
- d. Tea bags used to make tea in a university hostel canteen

- Ans
- ☐ 1. Only b and d
 - ☒ 2. Only a and c
 - ☐ 3. Only b and c
 - ☐ 4. Only a and b

Q.25 Who among the following social reformers established the 'Prarthana Samaj' in Bombay in 1876?

- Ans
- ☐ 1. Gopal Hari Deshmukh
 - ☒ 2. Atmaram Pandurang
 - ☐ 3. Ganesh Agarkar
 - ☐ 4. Bal Gangadhar Tilak

Section : English Language and Comprehension

Q.1 Select the most appropriate option to fill in the blank.
The croissant was _____, as was the coffee.

- Ans
- ☐ 1. ambitious
 - ☒ 2. excellent
 - ☐ 3. inferior
 - ☐ 4. eloquent

Q.2 Select the most appropriate ANTONYM that can substitute the underlined segment in the given sentence.

High-altitude climbing poses significant risks due to factors like altitude sickness, hypothermia and extreme weather conditions.

- Ans
- ☐ 1. magnificent
 - ☐ 2. tempestuous
 - ☒ 3. inconsequential
 - ☐ 4. plentiful

Q.3 Select the most appropriate meaning of the underlined idiom.

We talked over the matter for two hours; unfortunately, we could not reach a decision.

- Ans
- ☐ 1. Argued
 - ☐ 2. Debated
 - ☐ 3. Quarrelled

Q.4 Select the grammatically correct sentence from the given options..

- Ans**
- ☒ 1. A lot of books and notes place in order look most fascinating.
 - ☒ 2. A lot of book and notes placed in order looks most fascinating.
 - ☒ 3. A lot of books and notes placed in order look fascinating.
 - ☒ 4. A lot of books and notes placed on order looks most fascinating.

Q.5 Select the most appropriate option to fill in the blank.

Doves _____ in the sky above me.

- Ans**
- ☒ 1. sour
 - ☒ 2. shore
 - ☒ 3. soar
 - ☒ 4. sore

Q.6 Select the most appropriate option to fill in the blank.

The writer's _____ prose resonated with readers, evoking powerful emotions.

- Ans**
- ☒ 1. sporadic
 - ☒ 2. banal
 - ☒ 3. mundane
 - ☒ 4. eloquent

Q.7 Select the most appropriate meaning of the given idiom.

Like a dying duck in a thunderstorm

- Ans**
- ☒ 1. Bad swimmer or practitioner
 - ☒ 2. Fearful or scared of water
 - ☒ 3. Dejected or hopeless
 - ☒ 4. Harmful or vigilant

Q.8 Select the option that correctly rectifies the underlined spelling error.
The beutiful flowers bloomed in the garden.

- Ans**
- ☒ 1. beautiful
 - ☒ 2. beautifuul
 - ☒ 3. beiutiful
 - ☒ 4. beautifull

Q.9 The following sentence has been split into four segments. Identify the segment that contains a grammatical error.

The train is running / late by six hours / so it / cannot make over the time.

- Ans**
- ☒ 1. The train is running
 - ☒ 2. so it
 - ☒ 3. cannot make over the time
 - ☒ 4. late by six hours

Q.10 Select the option that can be used as a one-word substitute for the given group of words.

The scientific study of the structure and form of animals and plants

- Ans**
- ☒ 1. Biology
 - ☒ 2. Morphology
 - ☒ 3. Zoology
 - ☒ 4. Botany

Q.11 Select the most appropriate synonym of the given word.
Idle

- Ans**
- ☒ 1. Unoccupied
 - ☒ 2. Uneasy
 - ☒ 3. Ungrateful
 - ☒ 4. Unsafe

Q.12 Select the most appropriate adjective to fill in the blank.

The orator declared that the women are _____ than the men.

- Ans**
- ☒ 1. intelligent
 - ☒ 2. intelligenter
 - ☒ 3. most intelligent
 - ☒ 4. more intelligent

Q.13 Select the most appropriate option to fill in the blank.

The teacher emphasised the importance of _____ correct grammar and punctuation in our writing.

- Ans**
- ☒ 1. using
 - ☒ 2. used
 - ☒ 3. use
 - ☒ 4. uses

Q.14 Select the most appropriate **ANTONYM** of the underlined segment in the given sentence.

It's important to bring up sensitive topics in a respectful manner.

- Ans**
- ☒ 1. Drowsy
 - ☒ 2. Cordial
 - ☒ 3. Considerate
 - ☒ 4. Strong

Q.15 Select the most appropriate option that can substitute the underlined segment in the given sentence.
Gold is much costlier than any other metal.

- Ans**
- ☒ 1. many
 - ☒ 2. most
 - ☒ 3. more
 - ☒ 4. most costlier

Q.16 Select the most appropriate option to fill in the blank.
She _____ the book to her friend.

- Ans**
- ☒ 1. lend
 - ☒ 2. lent
 - ☒ 3. lamed
 - ☒ 4. leant

Q.17 Select the most appropriate **ANTONYM** that can substitute the underlined segment in the given sentence.

Amit, the stand-up comedian, delivered a hilarious performance.

- Ans**
- ☒ 1. ideological
 - ☒ 2. serious
 - ☒ 3. pertinent
 - ☒ 4. spleen

Q.18 Select the grammatically correct sentence from the given options.

- Ans**
- ☒ 1. The Nile is the long river in the world with a length about approximately 6650 km.
 - ☒ 2. The Nile is the most long river in the world of a length of approximately 6650 km.
 - ☒ 3. The Nile is the longest river in the world with a length of approximately 6650 km.
 - ☒ 4. The Nile is the longest river in the world with a length about approximately 6650 km.

Q.19 Select the **INCORRECTLY** spelt word.

- Ans**
- ☒ 1. Machenical
 - ☒ 2. Technical
 - ☒ 3. Annual
 - ☒ 4. Regulator

Q.20 Select the most appropriate adjective to fill in the blank.

Jack always looks handsome, even if he is a _____ out of style.

- Ans**
- ☒ 1. less
 - ☒ 2. more little
 - ☒ 3. little
 - ☒ 4. least

Comprehension:

In the following passage, some words have been deleted. Read the passage carefully and select the most appropriate option to fill in each blank.

It is true that strangers meeting for the first time seem to feel _____1_____ if they do not engage _____2_____ small talk. Usually, this is _____3_____ and even necessary if strangers are to size each other up. But, this small talk aside, what are some _____4_____ rules for general conversation?
In the first place, certain _____5_____ should be taboo. Kitchen topics, bus time-tables and other dull or specialised things should be barred from general discussion.

SubQuestion No : 21

Q.21 Select the most appropriate option to fill in blank number 1.

- Ans**
- ☒ 1. discomforts
 - ☒ 2. comforting
 - ☒ 3. uncomfortable
 - ☒ 4. comforts

Comprehension:

In the following passage, some words have been deleted. Read the passage carefully and select the most appropriate option to fill in each blank.

It is true that strangers meeting for the first time seem to feel _____1_____ if they do not engage _____2_____ small talk. Usually, this is _____3_____ and even necessary if strangers are to size each other up. But, this small talk aside, what are some _____4_____ rules for general conversation?
In the first place, certain _____5_____ should be taboo. Kitchen topics, bus time-tables and other dull or specialised things should be barred from general discussion.

SubQuestion No : 22

Q.22 Select the most appropriate option to fill in blank number 2.

- Ans**
- ☒ 1. by
 - ☒ 2. from
 - ☒ 3. on
 - ☒ 4. in

Comprehension:

In the following passage, some words have been deleted. Read the passage carefully and select the most appropriate option to fill in each blank.

It is true that strangers meeting for the first time seem to feel ____1____ if they do not engage ____2____ small talk. Usually, this is ____3____ and even necessary if strangers are to size each other up. But, this small talk aside, what are some ____4____ rules for general conversation?
In the first place, certain ____5____ should be taboo. Kitchen topics, bus time-tables and other dull or specialised things should be barred from general discussion.

SubQuestion No : 23

Q.23 Select the most appropriate option to fill in blank number 3.

- Ans**
- ☒ 1. remedy
 - ☒ 2. harmless
 - ☒ 3. comedy
 - ☒ 4. happy

Comprehension:

In the following passage, some words have been deleted. Read the passage carefully and select the most appropriate option to fill in each blank.

It is true that strangers meeting for the first time seem to feel ____1____ if they do not engage ____2____ small talk. Usually, this is ____3____ and even necessary if strangers are to size each other up. But, this small talk aside, what are some ____4____ rules for general conversation?
In the first place, certain ____5____ should be taboo. Kitchen topics, bus time-tables and other dull or specialised things should be barred from general discussion.

SubQuestion No : 24

Q.24 Select the most appropriate option to fill in blank number 4.

- Ans**
- ☒ 1. eliminating
 - ☒ 2. illuminative
 - ☒ 3. elementary
 - ☒ 4. alimentary

Comprehension:

In the following passage, some words have been deleted. Read the passage carefully and select the most appropriate option to fill in each blank.

It is true that strangers meeting for the first time seem to feel ____1____ if they do not engage ____2____ small talk. Usually, this is ____3____ and even necessary if strangers are to size each other up. But, this small talk aside, what are some ____4____ rules for general conversation?
In the first place, certain ____5____ should be taboo. Kitchen topics, bus time-tables and other dull or specialised things should be barred from general discussion.

SubQuestion No : 25

Q.25 Select the most appropriate option to fill in blank number 5.

- Ans**
- ☒ 1. books
 - ☒ 2. subjects
 - ☒ 3. objects
 - ☒ 4. essays