

Exam Date	02/08/2022
Exam Time	2:30 PM - 3:30 PM
Subject	Selection Post Phase X Graduate Level

Section : General Intelligence

Q.1 In a code language, 'BRACE' is written as 'GECTD' and 'DORM' is written as 'OTQF'.
How will 'INQUEST' be written in that language?

- Ans
- 1. VUGWSPK
 - 2. VUGWSPJ
 - 3. VUGWSTK
 - 4. VUGWSTJ

Question ID : 2643306894
Status : 0 Answered
Chosen Option : 1

Q.2 Select the option that represents the correct order of the given words as they would appear in an English dictionary. (Note: the given words may or may not be meaningful words).

- 1. Economist
- 2. Earlier
- 3. Ecology
- 4. Embarrass
- 5. Emergency

- Ans
- 1. 2, 3, 1, 4, 5
 - 2. 2, 1, 3, 5, 4
 - 3. 2, 3, 1, 5, 4
 - 4. 2, 1, 3, 4, 5

Question ID : 2643307808
Status : 0 Answered
Chosen Option : 3

Q.3 In a certain code language, 'CATHOLIC' is written as '79', 'AUDIENCE' is written as '70', how will 'ASSEMBLY' be written in that language?

- Ans
- 1. 109
 - 2. 108
 - 3. 100
 - 4. 104

Question ID : 2643307810
Status : 6 Answered
Chosen Option : 4

Q.4 W i

in hch two numbers (not the digits of the numbers) and two signs should beterchanged to make the given equation correct?
 $25 \div 12 \times 5 - 36 + 24 = 72$

- Ans
- 1. 5 and 12; × and -
 - 2. 5 and 12; + and -
 - 3. 36 and 25; × and +
 - 4. 24 and 5; + and -

Question ID : 2643306761
Status : 3 Answered
Chosen Option : 2

Q.5 Pointing towards a woman, Allwyn said, "She is the mother of my brother's son's brother's mother's husband." How is that woman related to Allwyn's brother?

- Ans
- 1. Mother's sister
 - 2. Mother
 - 3. Mother's
 - 4. Sister

Question ID : 2643306758
Status : 6 Answered
Chosen Option : 2

Q.6 Which letter-cluster will replace the question mark (?) and complete the given series?
UZVD, SCTG, ?, OIPM, MLNP

- Ans
- 1. QFRJ
 - 2. PFRJ
 - 3. PFSJ
 - 4. QFSJ

Question ID : 2643307820
Status : 2 Answered
Chosen Option : 1

Q.7 Select the word-pair that best represents a similar relationship to the one expressed in the pair of words given below. (The words must be considered as meaningful English words and must not be related to each other based on the number of letters/number of consonants/vowels in the word)

Room heater : Winter

- Ans
- 1. Raincoat : Monsoon
 - 2. Leaves : Autumn
 - 3. Heat : Summer
 - 4. Wind : Spring

Question ID : 2643306597
Status : 2 Answered
Chosen Option : 1

Q.8 In a certain code

in a certain language, 'LENGTH' is written as 'MDKGSF' and 'ESCAPE' is written as 'BRDDOZ'. How will 'MARGIN' be written in that language?

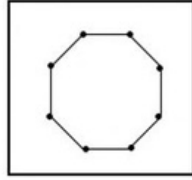
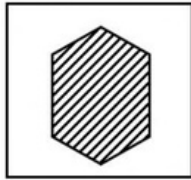
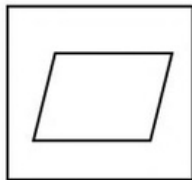
- Ans
- 1. QZLFMH
 - 2. QLZMHF
 - 3. QZLMHF
 - 4. QZLFHM

Question ID : 2643307766

Status : 0 Answered

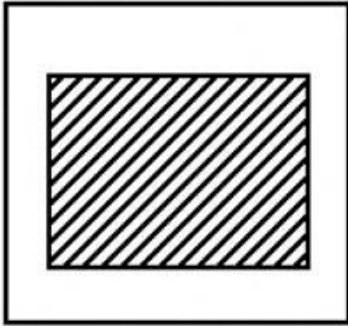
Chosen Option : 3

Q.9 Select the figure that will replace the question mark (?) in the following series.

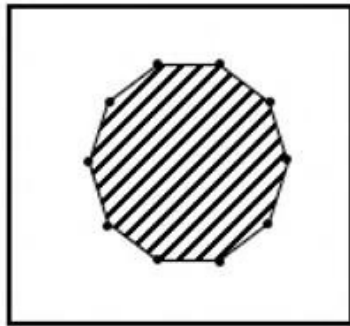


Ans

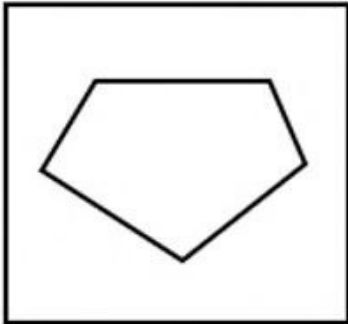
✗ 1.



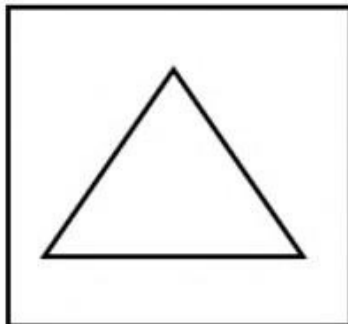
✓ 2.



✗ 3.



✗ 4.



Question ID : 2643307843
Status : 2 Answered
Chosen Option : 2

Q.10 Which of the following numbers will replace the question mark (?) in the given series?

13, 21, ?, 69, 133

- Ans
- 1. 52
 - 2. 37
 - 3. 33
 - 4. 41

Question ID : 2643307871
Status : 5 Answered
Chosen Option : 2

Q.11 Select the set in which the numbers are related in the same way as are the numbers of the following sets.

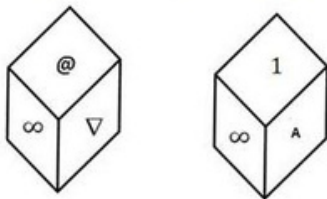
(NOTE : Operations should be performed on the whole numbers, without breaking down the numbers into its constituent digits. E.g. 13 - Operations on 13 such as adding /deleting /multiplying etc. to 13 can be performed. Breaking down 13 into 1 and 3 and then performing mathematical operations on 1 and 3 is NOT allowed)

(7, 35, 42), (4, 20, 24)

- Ans
- 1. (8, 56, 72)
 - 2. (9, 45, 54)
 - 3. (6, 36, 48)
 - 4. (12, 60, 48)

Question ID : 2643307866
Status : 3 Answered
Chosen Option : 2

Q.12 Two positions of a cube are shown. What will come opposite to the face showing '@'?



- Ans
- 1. A
 - 2. 1
 - 3. ∞
 - 4. ▽

Question ID : 2643307847
Status : 0 Answered
Chosen Option : 2

Q.13 In a code language, 'TRAIN' is written as 'PKCTV' and 'MESH' is written as 'JUGO'. How will 'OMBRE' be written in that language?

- Ans
- 1. QODTG
 - 2. GODTQ
 - 3. GTDQQ
 - 4. GTDOQ

Question ID : 2643306893
Status : 9 Answered
Chosen Option : 4

Q.14 In a certain code

'he loves children' is written as 'AA CC PP', 'children like candies' is written as 'ZZ PP QQ' and 'she loves candies' is written as 'QQ AA PP'. What is the code for the word 'like' in that language?

- Ans
- 1. PP
 - 2. NN
 - 3. ZZ
 - 4. QQ

Question ID : 2643307780
Status : 8 Answered
Chosen Option : 3

Q.15 Three statements are given, followed by three conclusions numbered I, II and III. Assuming the statements to be true, even if they seem to be at variance with commonly known facts, decide which of the conclusions logically follow(s) from the statements.

Statements:

All tigers are fishes.
No elephant is a tiger.
Some deer are tigers.

Conclusions:

I. Some fishes are deer.
II. No elephant is a deer.
III. No deer is a fish.

- Ans
- 1. Only conclusion I and III follow.
 - 2. Only conclusion I follows.
 - 3. Only conclusion II follows.
 - 4. Only conclusion I and II follow.

Question ID : 2643307805
Status : 4 Answered
Chosen Option : 2

Q.16 Select the word-pair that best represents a similar relationship to the one expressed in the pair of words given below.

(The words must be considered as meaningful English words and must not be related to each other based on the number of letters/number of consonants/vowels in the word.)

Bird : Badminton

- Ans
- 1. Cue : Billiards
 - 2. Kohli : Cricket
 - 3. Wash : Dishes
 - 4. Ronaldo : Football

Question ID : 2643307741
Status : 7 Answered
Chosen Option : 1

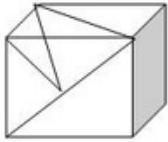
Q.17 Select the option that is related to the third word in the same way as the second word is related to the first word. (The words must be considered as meaningful English words and must NOT be related to each other based on the number of letters/number of consonants/vowels in the word.)

Loss : Profit :: Expense : ? _____

- Ans
- 1. Spend
 - 2. Tax
 - 3. Income
 - 4. Earn

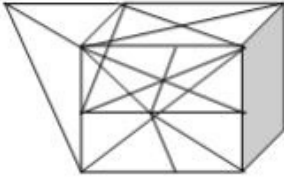
Question ID : 2643306756
Status : 3 Answered
Chosen Option : 3

Q.18 Select the option in which the given figure is embedded (rotation is NOT allowed).

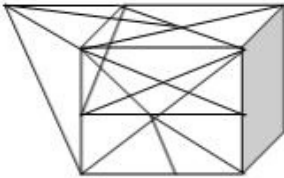


Ans

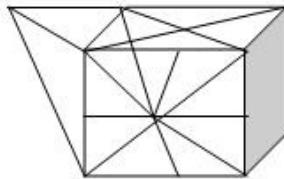
1.



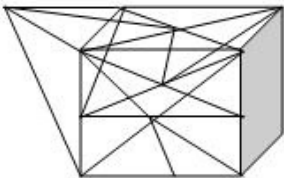
2.



3.



4.



Question ID : 2643307834
Status : 4 Answered
Chosen Option : 3

Q.19 Select the option that represents the correct order of the given words as they would appear in an English dictionary.

1. Editorial
2. Education
3. Edition
4. Effective
5. Effortless
6. Ecosystem

Ans 1. 6, 1, 3, 2, 4, 5

2. 6, 3, 2, 1, 4, 5

3. 6, 3, 1, 2, 4, 5

4. 6, 3, 1, 2, 5, 4

Question ID : 2643307815
Status : 0 Answered
Chosen Option : 3

Q.20'A # B' m

'A eans 'A is the brother of B'. @ B' means 'A is the daughter of B'.

'A & B' means 'A is the husband of B'.

'A % B' means 'A is the wife of B'.

If

V & S @ F % H # T @ Q, then how is V related to H?

Ans

1. Father

2. Daughter's husband

3. Father's father

4. Wife's father

Question ID : 2643307823

Status : 9 Answered

Chosen Option : 2

Q.21Three statements are given, followed by three conclusions numbered I, II and III.

Assuming the statements to be true, even if they seem to be at variance with commonly known facts, decide which of the conclusions logically follow(s) from the statements.

Statement :

All Bananas are Grapes.

All Papayas are Pineapple.

Some Pineapples are Banana.

Conclusions:

(I) Some Papayas are Grapes.

(II) Some Grapes are Pineapples.

(III) Some Bananas are Papayas.

Ans

1. Only Conclusion II follows.

2. Both Conclusions I and II follow.

3. Only Conclusion I follows.

4. Both Conclusions I and III

follow.

Question ID : 2643306896

Status : 1 Answered

Chosen Option : 1

Q.22Select the option that is related to the fifth letter-cluster in the same way as the second letter-cluster is related to the first letter-cluster and the fourth letter-cluster is related to the third letter-cluster.

CREATION : ETGCVKQP :: UNIVERSE : WPKXGTUG :: PLANET : ?

Ans

1. RNCPGV

2. RPCGVN

3. RCPNGV

4. RPGVNC

Question ID : 2643307800

Status : 3 Answered

Chosen Option : 1

Q.23In a certain code language, 'CHOICE' is written as '53', 'CHARGE' is written as '52', how will 'CHANCE' be written in that language?

Ans

1. 50

2. 44

3. 54

4. 48

Question ID : 26433078118

Status : Not Answered

Chosen Option : --

Q.24 Select the option that represents the letters that, when sequentially placed from left to right in the blanks below, will complete the letter series.
NOI ___ RCN ___ AERCN_IT_ERC_OITA ___ C

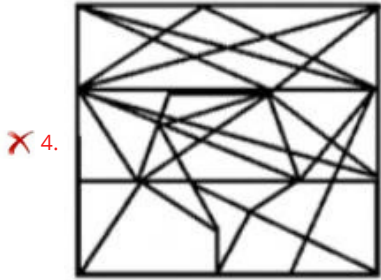
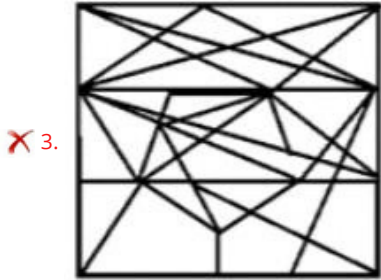
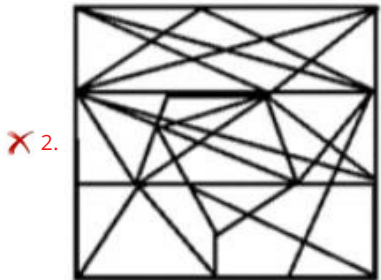
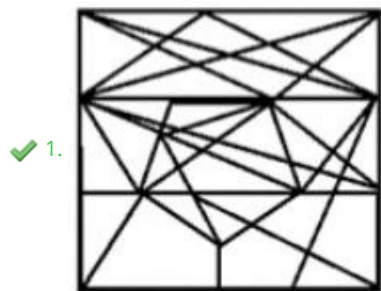
- Ans
- 1. TEAIOTONERA
 - 2. TOANERTAEIOI
 - 3. TONERATEAIO
 - 4. TAEOITOANER

Question ID : 2643307801
Status : 0 Answered
Chosen Option :4

Q.25 Select the option figure in which the given figure is embedded (rotation is NOT allowed).



Ans



Question ID : 2643307849
Status : 9 Answered
Chosen Option :1

Q.1 S I c t t

See the most appropriate option to fill in the blank.aster eggs used to be painted chicken eggs, but a modern_____ is to substitute them with chocolate eggs or plastic eggs filled with confectionery such as jelly beans.

- Ans
- 1. legacy
 - 2. ethic
 - 3. lore
 - 4. custom

Question ID : 2643306086
Status : 0 Answered
Chosen Option :4

Q.2Select the option that expresses the given sentence in passive voice.
Rahim's house is building rapidly.

- Ans
- 1. Rahim's house was built rapidly.
 - 2. House of Rahim has been built rapidly.
 - 3. House of Rahim is built rapidly.
 - 4. Rahim's house is being built rapidly.

Question ID : 2643305857
Status : 3 Answered
Chosen Option :4

Q.3Select the most appropriate synonym of the given word.

DISMAL

- Ans
- 1. gloomy
 - 2. cheerful
 - 3. encouraging
 - 4. bright

Question ID : 2643307677
Status : 9 Answered
Chosen Option :3

Q.4Select the most appropriate meaning of the underlined word.

The captain disdained the roaring impatience and mutinous disposition of his crews.

- Ans
- 1. Treated with scorn
 - 2. Called in question
 - 3. Gave due importance
 - 4. Release from captivity

Question ID : 2643305863
Status : 3 Answered
Chosen Option :2

Q.5 In the given sentence, a word is given in brackets. Select the most appropriate ANTONYM of the word to fill in the blank.
The kids are feeling bored, but they are _____ (eager) to participate in the activities

- Ans
- 1. passive
 - 2. reluctant
 - 3. nervous
 - 4. repulsive

Question ID : 2643305847
Status : 2 Answered
Chosen Option :3

Q.6 Select the most appropriate option that can substitute the underlined segment in the given sentence.

Hobby is a work which a man undertakes when he is not working for pleasure.

- Ans
- 1. in his available time
 - 2. in his scheduled time
 - 3. in his spare time
 - 4. in his daytime

Question ID : 2643305853
Status : 7 Answered
Chosen Option :3

Q.7 Select the sentence which does NOT have a spelling error.

- Ans
- 1. There is a statutory warning on every packet of cigarettes.
 - 2. There is a statutory warning on every packet of cigarettes.
 - 3. There is a statutory warning on every packet of cigarettes.
 - 4. There is a statutory warning on every packet of cigaretes.

Question ID : 2643306092
Status : 5 Answered
Chosen Option :2

Q.8 Select the most appropriate option to fill in the blank.

Countries like China and the United States invest _____ in wind, hydro, solar and biofuels.

- Ans
- 1. profoundly
 - 2. achingly
 - 3. absolutely
 - 4. heavily

Question ID : 2643306077
Status : 6 Answered
Chosen Option :4

Q.9 Select the option that expresses the given sentence in direct speech.
Jaya asked if Riya was doing better than the previous day.

- Ans
- 1. Jaya said to Riya, "Are you doing better than before?"
 - 2. Jaya said to Riya, "How are you doing today?"
 - 3. Jaya said to Riya, "Are you doing better than yesterday?"
 - 4. Jaya said to Riya, "If you are doing better than yesterday?"

Question ID : 2643305949
Status : 9 Answered
Chosen Option :3

Q.10 Select

It t the most appropriate meaning of the given idiom.'s a piece of cake

- Ans
- 1. It's tough
 - 2. It's easy
 - 3. It's tasty
 - 4. It's horrible

Question ID : 2643305859
Status : 4 Answered
Chosen Option :2

Q.11 Select the option that can be used as a one-word substitute for the given group of words.

An arrangement of parts or elements in a particular form or figure

- Ans
- 1.
 - Amorphousness
 - 2. Delineation
 - 3. Configuration
 - 4. Contortion

Question ID : 2643306017
Status : 7 Answered
Chosen Option :3

Q.12 Parts of the given sentence have been given as options. One of them contains a spelling error. Select the option that rectifies the error.

Heritage helps us understand our past, appreciate our present and shape our future.

- Ans
- 1. present
 - 2. appreciate
 - 3. Heritage
 - 4.
understand

Question ID : 2643305957
Status : 7 Answered
Chosen Option :2

Q.13 Select the option that expresses the given sentence in direct speech.
Harry asked me if I wanted to see magic.

- Ans
- 1. Harry said to me, "Do you want to see magic?"
 - 2. Harry said, "If you want to see magic?"
 - 3. Harry said to me, "If you want to see magic?"
 - 4. Harry said, "Do you want to see magic?"

Question ID : 2643305949
Status : 8 Answered
Chosen Option :1

Q.14 Select the option that expresses the given sentence in reported speech.

Nayan asked, "Can I call you back tomorrow?"

- Ans
- 1. Nayan asked if he could call me back tomorrow.
 - 2. Nayan asked if he could call me back the next
 - day. 3. Nayan asked if he can call me back
 - tomorrow.
 - 4. Nayan asked if he should call me back tomorrow.

Question ID : 2643305905
Status : 6 Answered
Chosen Option :2

Q.15 Select the option that will improve the underlined part of the given sentence.

The walls of the temple caved out due to weak construction.

- Ans
- 1. apart
 - 2. at
 - 3.
 - around
 - 4. in

Question ID : 2643305904
Status : 2 Answered
Chosen Option :1

Comprehension:

In the following passage, some words have been deleted. Read the passage carefully and select the most appropriate option to fill in each blank.

The soft layer of the earth's (1)_____ on which plants grow is referred to as soil. Soil includes a huge amount of both organic and inorganic (2)_____. In the soil, the organic components known as humus are formed from (3)_____ plant and animal remnants. These are combined with weathered particles of various rocks to form soil. Weathering occurs as a result of different chemical and physical (4)_____ that occur on the earth's surface. Soil formation is a (5)_____ process in general. For example, the creation of a 2.5 cm thick soil layer might take more than 1000 years.

SubQuestion No : 16

Q.16 Select the most appropriate option to fill in blank no. 1.

- Ans
- 1. surface
 - 2. boundary
 - 3. location
 - 4. atmosphere

Question ID : 2643305872
Status : 7 Answered
Chosen Option :1

Comprehension:

In the following passage, some words have been deleted. Read the passage carefully and select the most appropriate option to fill in each blank.

The soft layer of the earth's (1)_____ on which plants grow is referred to as soil. Soil includes a huge amount of both organic and inorganic (2)_____. In the soil, the organic components known as humus are formed from (3)_____ plant and animal remnants. These are combined with weathered particles of various rocks to form soil. Weathering occurs as a result of different chemical and physical (4)_____ that occur on the earth's surface. Soil formation is a (5)_____ process in general. For example, the creation of a 2.5 cm thick soil layer might take more than 1000 years.

SubQuestion No : 17

Q.17 Select the most appropriate option to fill in blank no. 2.

Ans 1.

components

2. solvent

3. pesticides

4. plants

Question ID : 2643305872
Status : 8 Answered
Chosen Option :1

Comprehension:

In the following passage, some words have been deleted. Read the passage carefully and select the most appropriate option to fill in each blank.

The soft layer of the earth's (1)_____ on which plants grow is referred to as soil. Soil includes a huge amount of both organic and inorganic (2)_____. In the soil, the organic components known as humus are formed from (3)_____ plant and animal remnants. These are combined with weathered particles of various rocks to form soil. Weathering occurs as a result of different chemical and physical (4)_____ that occur on the earth's surface. Soil formation is a (5)_____ process in general. For example, the creation of a 2.5 cm thick soil layer might take more than 1000 years.

SubQuestion No : 18

Q.18 Select the most appropriate option to fill in blank no. 3.

Ans 1. deformed

2. deoxidised

3. desterilised

4. decomposed

Question ID : 2643305872
Status : 9 Answered
Chosen Option :4

Comprehension:

In the following passage, some words have been deleted. Read the passage carefully and select the most appropriate option to fill in each blank.

The soft layer of the earth's (1)_____ on which plants grow is referred to as soil. Soil includes a huge amount of both organic and inorganic (2)_____. In the soil, the organic components known as humus are formed from (3)_____ plant and animal remnants. These are combined with weathered particles of various rocks to form soil. Weathering occurs as a result of different chemical and physical (4)_____ that occur on the earth's surface. Soil formation is a (5)_____ process in general. For example, the creation of a 2.5 cm thick soil layer might take more than 1000 years.

SubQuestion No : 19

Q.19 Select the most appropriate option to fill in blank no. 4.

Ans 1.

compositions

2. fluctuations

3. interactions

4. connections

Question ID : 2643305873
Status : 0 Answered
Chosen Option :1

Comprehension:

In the following passage, some words have been deleted. Read the passage carefully and select the most appropriate option to fill in each blank.

The soft layer of the earth's (1)_____ on which plants grow is referred to as soil. Soil includes a huge amount of both organic and inorganic (2)_____. In the soil, the organic components known as humus are formed from (3)_____ plant and animal remnants. These are combined with weathered particles of various rocks to form soil. Weathering occurs as a result of different chemical and physical (4)_____ that occur on the earth's surface. Soil formation is a (5)_____ process in general. For example, the creation of a 2.5 cm thick soil layer might take more than 1000 years.

SubQuestion No : 20

Q.20 Select the most appropriate option to fill in blank no. 5.

- Ans
- 1. gradual
 - 2.
 - chemical
 - 3. steep
 - 4. abrupt

Question ID : 2643305873
Status : 1 Answered
Chosen Option :1

Comprehension:

Read the given passage and answer the question that follows.

Between him and Darcy there was a very steady friendship, in spite of great opposition of character. Bingley was endeared to Darcy by the easiness, openness, and ductility of his temper, though no disposition could offer a greater contrast to his own, and though with his own he never appeared dissatisfied. On the strength of Darcy's regard Bingley had the firmest reliance, and of his judgment the highest opinion. In understanding, Darcy was the superior. Bingley was by no means deficient, but Darcy was clever. He was at the same time haughty, reserved, and fastidious, and his manners, though well bred, were not inviting. In that respect his friend had greatly the advantage. Bingley was sure of being liked wherever he appeared, Darcy was continually giving offence.

The manner in which they spoke of the Meryton assembly was sufficiently characteristic. Bingley had never met with pleasanter people or prettier girls in his life; everybody had been most kind and attentive to him; there had been no formality, no stiffness; he had soon felt acquainted with all the room; and as to Miss Bennet, he could not conceive an angel more beautiful. Darcy, on the contrary, had seen a collection of people in whom there was little beauty and no fashion, for none of whom he had felt the smallest interest, and from none received either attention or pleasure. Miss Bennet he acknowledged to be pretty, but she smiled too much.

Mrs. Hurst and her sister allowed it to be so—but still they admired her and liked her, and pronounced her to be a sweet girl, and one whom they should not object to know more of. Miss Bennet was therefore established as a sweet girl, and their brother felt authorised by such commendation to think of her as he chose.

SubQuestion No : 21

Q.21 Select the most appropriate title for the passage from the following options.

- Ans
- 1. Darcy and Bingley
 - 2. Darcy and Friends
 - 3. Bingley and Friends
 - 4. The Town of Meryton

Question ID : 2643306351
Status : 3 Answered
Chosen Option :1

Comprehension:

Read the given passage and answer the question that follows.

Between him and Darcy there was a very steady friendship, in spite of great opposition of character. Bingley was endeared to Darcy by the easiness, openness, and ductility of his temper, though no disposition could offer a greater contrast to his own, and though with his own he never appeared dissatisfied. On the strength of Darcy's regard Bingley had the firmest reliance, and of his judgment the highest opinion. In understanding, Darcy was the superior. Bingley was by no means deficient, but Darcy was clever. He was at the same time haughty, reserved, and fastidious, and his manners, though well bred, were not inviting. In that respect his friend had greatly the advantage. Bingley was sure of being liked wherever he appeared, Darcy was continually giving offence.

The manner in which they spoke of the Meryton assembly was sufficiently characteristic. Bingley had never met with pleasanter people or prettier girls in his life; everybody had been most kind and attentive to him; there had been no formality, no stiffness; he had soon felt acquainted with all the room; and as to Miss Bennet, he could not conceive an angel more beautiful. Darcy, on the contrary, had seen a collection of people in whom there was little beauty and no fashion, for none of whom he had felt the smallest interest, and from none received either attention or pleasure. Miss Bennet he acknowledged to be pretty, but she smiled too much.

Mrs. Hurst and her sister allowed it to be so—but still they admired her and liked her, and pronounced her to be a sweet girl, and one whom they should not object to know more of. Miss Bennet was therefore established as a sweet girl, and their brother felt authorised by such commendation to think of her as he chose.

SubQuestion No : 22

Q.22 Select the most appropriate meaning of 'fastidious' from the following options.

- Ans 1. Undemanding
 2. Concerned about accuracy and detail
 3. Queasy
 4. Prissy

Question ID : 2643306351
Status : 7 Answered
Chosen Option :2

Comprehension:

Read the given passage and answer the question that follows.

Between him and Darcy there was a very steady friendship, in spite of great opposition of character. Bingley was endeared to Darcy by the easiness, openness, and ductility of his temper, though no disposition could offer a greater contrast to his own, and though with his own he never appeared dissatisfied. On the strength of Darcy's regard Bingley had the firmest reliance, and of his judgment the highest opinion. In understanding, Darcy was the superior. Bingley was by no means deficient, but Darcy was clever. He was at the same time haughty, reserved, and fastidious, and his manners, though well bred, were not inviting. In that respect his friend had greatly the advantage. Bingley was sure of being liked wherever he appeared, Darcy was continually giving offence.

The manner in which they spoke of the Meryton assembly was sufficiently characteristic. Bingley had never met with pleasanter people or prettier girls in his life; everybody had been most kind and attentive to him; there had been no formality, no stiffness; he had soon felt acquainted with all the room; and as to Miss Bennet, he could not conceive an angel more beautiful. Darcy, on the contrary, had seen a collection of people in whom there was little beauty and no fashion, for none of whom he had felt the smallest interest, and from none received either attention or pleasure. Miss Bennet he acknowledged to be pretty, but she smiled too much.

Mrs. Hurst and her sister allowed it to be so—but still they admired her and liked her, and pronounced her to be a sweet girl, and one whom they should not object to know more of. Miss Bennet was therefore established as a sweet girl, and their brother felt authorised by such commendation to think of her as he chose.

SubQuestion No : 23

Q.23 Who was understanding, clever, haughty and reserved?

- Ans 1. Miss Bennett
 2. Bingley
 3. Mrs. Hurst
 4. Darcy

Question ID : 2643306351
Status : 6 Answered
Chosen Option :4

Comprehension:

Read the given passage and answer the question that follows.

Between him and Darcy there was a very steady friendship, in spite of great opposition of character. Bingley was endeared to Darcy by the easiness, openness, and ductility of his temper, though no disposition could offer a greater contrast to his own, and though with his own he never appeared dissatisfied. On the strength of Darcy's regard Bingley had the firmest reliance, and of his judgment the highest opinion. In understanding, Darcy was the superior. Bingley was by no means deficient, but Darcy was clever. He was at the same time haughty, reserved, and fastidious, and his manners, though well bred, were not inviting. In that respect his friend had greatly the advantage. Bingley was sure of being liked wherever he appeared, Darcy was continually giving offence.

The manner in which they spoke of the Meryton assembly was sufficiently characteristic. Bingley had never met with pleasanter people or prettier girls in his life; everybody had been most kind and attentive to him; there had been no formality, no stiffness; he had soon felt acquainted with all the room; and as to Miss Bennet, he could not conceive an angel more beautiful. Darcy, on the contrary, had seen a collection of people in whom there was little beauty and no fashion, for none of whom he had felt the smallest interest, and from none received either attention or pleasure. Miss Bennet he acknowledged to be pretty, but she smiled too much.

Mrs. Hurst and her sister allowed it to be so—but still they admired her and liked her, and pronounced her to be a sweet girl, and one whom they should not object to know more of. Miss Bennet was therefore established as a sweet girl, and their brother felt authorised by such commendation to think of her as he chose.

SubQuestion No : 24

Q.24 Select the synonym of 'dependence' from the passage.

- Ans
- 1. Misgiving
 - 2. Reliance
 - 3. Relay
 - 4. Skepticism

Question ID : 2643306351
Status : 5 Answered
Chosen Option :2

Comprehension:

Read the given passage and answer the question that follows.

Between him and Darcy there was a very steady friendship, in spite of great opposition of character. Bingley was endeared to Darcy by the easiness, openness, and ductility of his temper, though no disposition could offer a greater contrast to his own, and though with his own he never appeared dissatisfied. On the strength of Darcy's regard Bingley had the firmest reliance, and of his judgment the highest opinion. In understanding, Darcy was the superior. Bingley was by no means deficient, but Darcy was clever. He was at the same time haughty, reserved, and fastidious, and his manners, though well bred, were not inviting. In that respect his friend had greatly the advantage. Bingley was sure of being liked wherever he appeared, Darcy was continually giving offence.

The manner in which they spoke of the Meryton assembly was sufficiently characteristic. Bingley had never met with pleasanter people or prettier girls in his life; everybody had been most kind and attentive to him; there had been no formality, no stiffness; he had soon felt acquainted with all the room; and as to Miss Bennet, he could not conceive an angel more beautiful. Darcy, on the contrary, had seen a collection of people in whom there was little beauty and no fashion, for none of whom he had felt the smallest interest, and from none received either attention or pleasure. Miss Bennet he acknowledged to be pretty, but she smiled too much.

Mrs. Hurst and her sister allowed it to be so—but still they admired her and liked her, and pronounced her to be a sweet girl, and one whom they should not object to know more of. Miss Bennet was therefore established as a sweet girl, and their brother felt authorised by such commendation to think of her as he chose.

SubQuestion No : 25

Q.25 What is the central theme of the passage?

- Ans
- 1. Darcy and his unlikeable qualities
 - 2. The contrast between Bingley and Darcy
 - 3. The similarities between Darcy and Bingley
 - 4. Bingley and his attractive qualities

Question ID : 2643306351
Status : 4 Answered
Chosen Option :2

Section : Quantitative Aptitude

Q.1 Shalini spends 60% of her salary. If her salary is increased by 40% and her expenditure is also increased by 30%, find the percentage increment or decrement in her savings.

- Ans 1. 55%
2. increment
3. 45% decrement
4. 45% increment
5. 55% decrement

Question ID : 2643306164
Status : 9 Answered
Chosen Option : 1

Q.2 The current population of a village is 1000 and its population is increasing at the rate of 10% every year. What will be the population of the village after three years?

- Ans 1. 1100
2. 1500
3. 1331
4. 1210

Question ID : 2643306168
Status : 2 Answered
Chosen Option : 3

Q.3 A police officer sees a thief from 200 metres. The thief flees, and the police officer pursues him. The thief and the officer are both running at 10 km/h and 11 km/h, respectively. At what distance will the officer apprehend the thief?

- Ans 1. 2.2 km
2. 2.5 km
3. 2 km
4. 3 km

Question ID : 2643305713
Status : 9 Answered
Chosen Option : 1

Q.4 A family saves 30% of the total income and the savings amount to ₹600 less than half of the expenditure. If the total expenditure is spent on health, food and education in the ratio of 3 : 5 : 6, then what amount of expenditure is spent on education?

- Ans 1. ₹3,600
2. ₹1,800
3. ₹8,400
4. ₹7,200

Question ID : 2643305878
Status : 5 Answered
Chosen Option : 1

Q.5 $[(\sin \theta \tan \theta + \cos \theta)^2 - 1]$ is equal to:

- Ans 1. $\tan \theta$
2. $\operatorname{cosec} \theta$
3. $\sec^2 \theta$
4. $\sec \theta$

Question ID : 2643306170
Status : 8 Answered
Chosen Option : 1

Q.6D Determine the largest angle if the angles of a triangle are in the ratio 3 : 4 : 5.

- Ans
- 1. 70°
 - 2. 75°
 - 3. 85°
 - 4. 65°

Question ID : 2643305715
Status : 0 Answered
Chosen Option :2

Q.7A dishonest shopkeeper claims to sell his articles at the cost price but uses 950 gm weight instead of one kilogram weight. What is his profit (rounded off to 1 decimal place) percentage?

- Ans
- 1. 4.5 Percent
 - 2. 7.8 Percent
 - 3. 11.1
 - Percent 4. 5.3
 - Percent

Question ID : 2643306320
Status : 8 Answered
Chosen Option :4

Q.8 The algebraic expression $25x^2 + 16y^2 + 9z^2 - 40xy + 24yz - 30zx$ is equal to:

- Ans
- 1. $(4y + 3z - 5x)(4x + 5y - 3z)$
 - 2. $(4y - 3z - 5x)(4x + 5y + 3z)$
 - 3. $(4y + 3z - 5x)^2$
 - 4. $(4y - 3z - 5x)^2$

Question ID : 2643305717
Status : 1 Answered
Chosen Option :3

Q.9 If $xy = 6$ and $x^2y + xy^2 + x + y = 63$, then the value of $x^2 + y^2$ is:

- Ans
- 1. 69
 - 2. 59
 - 3. 70
 - 4. 79

Question ID : 2643305818
Status : 4 Answered
Chosen Option :1

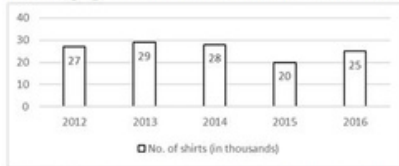
Q.10A sold an article to B at 25% profit. B sold it to C at a loss of 12%. If C paid Rs.1,650, then how much did A pay for it?

- Ans
- 1. Rs.1,480
 - 2. Rs.1,500
 - 3. Rs.1,100
 - 4. Rs.1,990

Question ID : 2643306320
Status : 5 Answered
Chosen Option :2

Q.11 Study the given bar-graph and answer the question that follows.

The bar-graph shows the number of shirts manufactured (in thousands) by a company during five years.



What is the percentage decrement in the production of shirts in the year 2015 as compared to 2014 (correct up to two decimals)?

- Ans
- 1. 30.12%
 - 2. 28.57%
 - 3. 29.57%
 - 4. 27.37%

Question ID : 2643306169
Status : 9 Answered
Chosen Option :2

Q.12 Factorize the given algebraic expression.

$$x^3 + 27y^3 + 64z^3 - 36xyz$$

- Ans
- 1. $(x - 3y - 4z)(x^2 + 9y^2 + 16z^2 - 3xy - 12yz - 4xz)$
 - 2. $(x + 3y + 4z)(x^2 + 9y^2 + 16z^2 - 3xy - 12yz - 4xz)$
 - 3. $(x + 3y + 4z)(x^2 + 9y^2 + 16z^2 - 12xy - 3yz - 4xz)$
 - 4. $(x + 3y + 4z)(x^2 + 9y^2 + 16z^2 + 3xy + 12yz + 4xz)$

Question ID : 2643306171
Status : 3 Answered
Chosen Option :2

Q.13 In a company, the average salary of all the employees is ₹20,000. The average salary of group-A employees is ₹32,000 while the average salary of group-B employees is ₹18,000. What is the number of employees in group-A if there are 72 employees in group-B?

- Ans
- 1. 9
 - 2. 12
 - 3. 6
 - 4. 8

Question ID : 2643306164
Status : 5 Answered
Chosen Option :2

Q.14 Which of the following is a pair of co-primes?

- Ans
- 1. (25, 31)
 - 2. (32, 62)
 - 3. (31, 93)
 - 4. (14, 35)

Question ID : 2643306337
Status : 0 Answered
Chosen Option :1

Q.15 Which of the following numbers is NOT divisible by 9?

Ans 1. 43516

2. 51543

3. 34155

4. 54315

Question ID : 2643306163
Status : 1 Answered
Chosen Option :1

Q.16 What is the fourth proportional of $\frac{1}{72}, \frac{1}{168}, \frac{1}{150}$?

Ans 1. $\frac{1}{375}$

2. $\frac{1}{275}$

3. $\frac{1}{350}$

4. $\frac{1}{250}$

Question ID : 2643306167
Status : 4 Answered
Chosen Option :3

Q.17 If AB is a chord of a circle with radius 5 units and C is a point on the circle such that $\angle ACB = \frac{\pi}{2}$, then the length of chord AB is:

Ans 1. 10 units

2. 2.5

units 3.

7.5 units

4. 5 units

Question ID : 2643305842
Status : 6 Answered
Chosen Option :1

Q.1 If θ is an acute angle and $\sin \theta + \operatorname{cosec} \theta = 2$, then the value of $\sin^{99} \theta + \operatorname{cosec}^{99} \theta$ is:

8 1. -1

Ans 2. 1

3. 0

4. 2

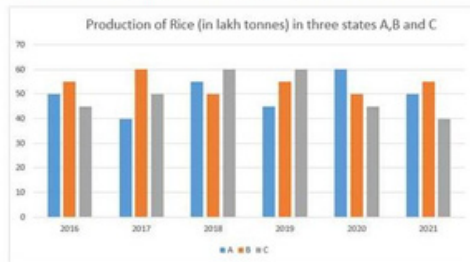
Question ID : 2643306110
Status : 0 Answered
Chosen Option :4

Q.19 A conical vessel has radius 4 cm and its curved surface area is $20\pi \text{ cm}^2$. The volume of conical vessel is:

- Ans
- 1. $18\pi \text{ cm}^3$
 - 2. $12\pi \text{ cm}^3$
 - 3. $26\pi \text{ cm}^3$
 - 4. $16\pi \text{ cm}^3$

Question ID : 2643305816
Status : 0 Answered
Chosen Option :4

Q.20 Study the given graph and answer the question that follows.



What is the difference between the production of rice in state C in 2016 and the production of rice in state B in 2019.

- Ans
- 1. 1,00,000 tonnes
 - 2. 15,00,000
 - 3. tonnes
 - 10,00,000 tonnes
 - 4. 10,000 tonnes

Question ID : 2643306510
Status : 2 Answered
Chosen Option :3

Q.21 Anil works 3 times faster than Sandeep. If Sandeep can complete a work independently in 12 days, the number of days in which Anil and Sandeep can together finish the work is:

- Ans
- 1. 4
 - 2. 2
 - 3. 3
 - 4. 5

Question ID : 2643305869
Status : 0 Answered
Chosen Option :3

Q.22 Mohan got a 20% discount on the marked price when he bought a bag. He sold it for 40% more than what he paid for it. The profit percentage on the marked price is:

- Ans
- 1. 11%
 - 2. 15%
 - 3. 8%
 - 4. 12%

Question ID : 2643305712
Status : 7 Answered
Chosen Option :4

Q.23 In a hotel, ration is available for 148 persons for 51 days. If 37 persons left the hotel, then for how many days will the remaining ration last?

- Ans
- 1. 69
 - 2. 68
 - 3. 65
 - 4. 67

Question ID : 2643306333
Status : 5 Answered
Chosen Option :2

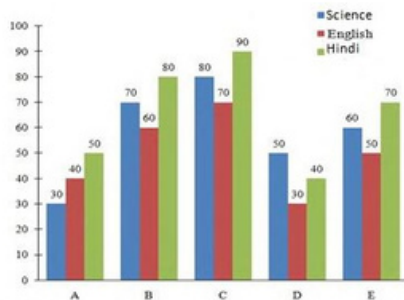
Q.24 The average weight of 12 persons is increased by 3.5 kg when one of them whose weight is 56 kg is replaced by a new man. The weight of the new man is:

- Ans
- 1. 90 kg
 - 2. 95 kg
 - 3. 98 kg
 - 4. 100 kg

Question ID : 2643305865
Status : 4 Answered
Chosen Option :3

Q.25 Study the given graph carefully and answer the question that follows.

Marks scored by five students in Science, English and Hindi are shown in the graph.



What is the difference between the total marks obtained by C and the total marks obtained by E?

- Ans
- 1. 55
 - 2. marks
 - 3. 50 marks
 - 4. 60 marks
 - 65 marks

Question ID : 2643306343
Status : 0 Answered
Chosen Option :3

Section : General Awareness

Q.1 In which year was Soil Health Card launched in India to enable the farmers to apply appropriate recommended dosages of nutrients for crop production and improving soil health and its fertility?

- Ans
- 1. 2017
 - 2. 2019
 - 3. 2013
 - 4. 2015

Question ID : 2643307699
Status : 5 Answered
Chosen Option :1

Q.2 How many members of the State Legislative Council are nominated by the Governor?

- Ans
- 1. One-third
 - 2. One-fourth
 - 3. One-sixth
 - 4. One-fifth

Question ID : 2643307711
Status : 6 Answered
Chosen Option :3

Q.3 Who among the following has become IAF's first woman fighter pilot from J&K?

- Ans
- 1. Garima Lahiri
 - 2. Apurva Lahiri
 - 3. Arundhati
 - 4. Mawya Sudan

Question ID : 2643307737
Status : 8 Answered
Chosen Option :4

Q.4 Which is NOT a Fundamental Duty?

- Ans
- 1. To protect public property
 - 2. To respect National Flag and National Anthem
 - 3. To preserve India's rich heritage and composite culture
 - 4. To respect the elders

Question ID : 2643307712
Status : 9 Answered
Chosen Option :4

Q.5 Which of the following states has a higher potential for solar energy?

- Ans
- 1. Odisha
 - 2. Rajasthan
 - 3. Tamil Nadu
 - 4. Kerala

Question ID : 2643307698
Status : 1 Answered
Chosen Option :2

Q.6 Which of the following chemical compounds is a naturally occurring orange/yellow pigment extracted from turmeric, which is used as a spice, in food colouring and as a traditional herbal medicine?

- Ans
- 1. Carmoisine
 - 2. Tartrazine
 - 3. Curcumin
 - 4. Cochineal

Question ID : 2643307728
Status : 1 Answered
Chosen Option :2

Q.7 Ac

According to Census 2011 of India, which of the following group of states have the highest female literacy rates?

- Ans
- 1. Rajasthan and Bihar
 - 2. Kerala and Mizoram
 - 3. Kerala and Tamil Nadu
 - 4. Sikkim and Nagaland

Question ID : 2643306716
Status : 5 Answered
Chosen Option :3

Q.8 Who appoints the Attorney General of India?

- Ans
- 1. Chief Justice of Supreme Court
 - 2. Prime Minister
 - 3. President
 - 4. Minister of Law and Justice

Question ID : 2643305408
Status : 6 Answered
Chosen Option :3

Q.9 In which of the following dances from Assam do the movements by the dancers resemble butterflies and birds?

- Ans
- 1. Bihu
 - 2. Deodhani
 - 3. Jhumar
 - 4. Bagurumba

Question ID : 2643307081
Status : 6 Answered
Chosen Option :1

Q.10 Who among the following has completed his term as the Chair of Governing Body of International Labour Organization in 2021?

- Ans
- 1. Amitav Ghosh
 - 2. Apurva Chandra
 - 3. HPS Ahluwalia
 - 4. Vikram Rana

Question ID : 2643307737
Status : 9 Answered
Chosen Option :3

Q.11 In _____, BR Ambedkar negotiated the Poona Pact with Mahatma Gandhi.

- Ans
- 1. 1932
 - 2. 1930
 - 3. 1933
 - 4. 1931

Question ID : 2643307700
Status : 3 Answered
Chosen Option :1

Q.12 In 2, who described the equation $P_1V_1 = P_2V_2$, where P_1 and V_1 are the initial pressure and volume values, and P_2 and V_2 are the pressure and volume values of the gas after the transformation?

- Ans
- 1. Robert Boyle
 - 2. Amedeo Avogadro
 - 3. Joseph Gay Lussac
 - 4. John Dalton

Question ID : 2643307729
Status : 3 Answered
Chosen Option :4

Q.13 General Election to the Legislative Assembly of which of the following States did not take place in February-March 2022?

- Ans
- 1. Punjab
 - 2. Manipur
 - 3. Uttar
 - 4. Pradesh
 - Rajasthan

Question ID : 2643307730
Status : 0 Answered
Chosen Option :4

Q.14 Mouma Das, who received Padma Shri Award in 2021, is a player of which of the following sports?

- Ans
- 1. Table
 - 2. Tennis
 - 3. Cricket
 - 4. Badminton
 - 5. Golf

Question ID : 2643307732
Status : 9 Answered
Chosen Option :1

Q.15 Which of the following was known as the forerunner of the Brahmo Samaj?

- Ans
- 1. Prarthana Sabha
 - 2. Atmiya Sabha
 - 3. Paramhansa Sabha
 - 4. Hindu Sabha

Question ID : 2643307702
Status : 9 Answered
Chosen Option :1

Q.16 In which year was the first reliable measurement on the properties of gases made by Anglo-Irish scientist Robert Boyle?

- Ans
- 1. 1661
 - 2. 1663
 - 3. 1662
 - 4. 1664

Question ID : 2643307717
Status : 4 Answered
Chosen Option :2

Q.17 Where was Babur buried for the first time in 1530?

- Ans
- 1. Kabul
 - 2. Agra
 - 3. Delhi
 - 4. Fargana

Question ID : 2643307705
Status : 1 Answered
Chosen Option :2

Q.18 Who achieved fame for the Pandanallur school of Bharatanatyam?

- Ans
- 1. Anita Ratnam
 - 2. Padma
 - 3. Subramanyam
 - 4. Meenakshi Pillai

Question ID : 2643307164
Status : 1 Answered
Chosen Option :4

Q.19 What is a 'Gopura' in South Indian temple architecture of the medieval period?

- Ans
- 1. A sanctum
 - 2. An
 - 3. A
 - 4. A pillar-like structure

Question ID : 2643307689
Status : 3 Answered
Chosen Option :2

Q.20 'Courage and Commitment: An Autobiography' is written by which Indian Politician?

- Ans
- 1. Margaret Alva
 - 2. Rahul Gandhi
 - 3. LK Advani
 - 4. Shashi Tharoor

Question ID : 2643307692
Status : 4 Answered
Chosen Option :1

Q.21 The Koraput Revolution occurred in _____ during the Quit India Movement.

- Ans
- 1. Orissa
 - 2. the United
 - 3. Bihar
 - 4. Bengal

Question ID : 2643307707
Status : 2 Answered
Chosen Option :4

Q.22 Whic

h biome is found in the northern parts of Asia, Europe and North America where 00 to 900 millimetres (12 to 35 in) of rain can be expected per year

- Ans
- 1. Taiga forests
 - 2. Temperate deciduous forests
 - 3. Coniferous forest
 - 4. Mediterranean forests

Question ID : 2643307727
Status : 7 Answered
Chosen Option :4

Q.23 When was the Ayushman Bharat Digital Mission launched?

- Ans
- 1. 27 September
 - 2021 2. 2 October
 - 2021
 - 3. 27 January 2020
 - 4. 17 February 2021

Question ID : 2643307737
Status : 0 Answered
Chosen Option :2

Q.24 Which of the following is the largest city of Myanmar?

- Ans
- 1. Naypyidaw
 - 2. Mandalay
 - 3. Patheingyi
 - 4. Yangon

Question ID : 2643306660
Status : 7 Answered
Chosen Option :4

Q.25 Which nation-wide campaign was initiated by the Government of India on Gandhi Jayanti, 2014?

- Ans
- 1. Swachh Bharat Abhiyan
 - 2. Mahatma Gandhi Pravasi Suraksha Yojana
 - 3. Mahatma Gandhi Bunkar Bima Yojana
 - 4. Gandhi Shilp Bazar

Question ID : 2643307694
Status : 3 Answered
Chosen Option :1

Q.12 Find the ratio of the curved surface area to the total surface area of a cylinder with diameter of base 14 cm and height 10 cm.

Ans

1. $\frac{11}{17}$

2. $\frac{5}{17}$

3. $\frac{13}{17}$

4. $\frac{10}{17}$

Question ID : 2643306170
Status : 3 Answered
Chosen Option : 3

Q.13 P buys an article for Rs.280 and sells it to Q at a profit of 25%. Q sells it to R at some profit. R sells it to S for Rs.560 making a profit of 40%. What percentage profit (rounded off to the nearest integer) did Q make?

Ans 1. 26 Percent

2. 14 Percent

3. 32 Percent

4. 20 Percent

Question ID : 2643306320
Status : 7 Answered
Chosen Option : 3

Q.14 Study the given table and answer the question that follows.

The table shows the production (in thousands) of four different types of tractors by a company during five years.

Year/Tractor Type	Type - A	Type - B	Type - C	Type - D
2010	18	25	12	19
2011	15	24	14	10
2012	23	13	17	13
2013	17	23	12	11
2014	14	26	20	18

Which type of tractor has same production in the years 2010 and 2013?

Ans 1. Type - B

2. Type - C

3. Type - A

4. Type - D

Question ID : 2643306169
Status : 5 Answered
Chosen Option : 2

Q.15 What is the average of the following observations?

2.5, 3.25, 4.75, 7.5, 3, 4, 3

Ans 1. 3.5

2. 4.18

3. 4.5

4. 4

Question ID : 2643305819
Status : 6 Answered
Chosen Option : 4

Q.16 What is the fourth proportional of 21, 56 and 27?

Ans 1. 72

2. 81

3. 54

4. 96

Question ID : 2643306333
Status : 2 Answered
Chosen Option : 1

Q.17 Only two candidates were contesting against each other in an election of a village. One candidate got 43.5% votes and was defeated by 3744 votes. How many votes did the winning candidate get?

Ans 1. 16500

2. 16272

3. 15275

4. 16200

Question ID : 2643306165
Status : 1 Answered
Chosen Option : 3

Q.18 If $P = \frac{x^2 - 100}{x^2 - 16}$ and $Q = \frac{x + 10}{x - 4}$, then the value of $\frac{P}{Q}$ is:

Ans 1. $\frac{x + 10}{x + 4}$

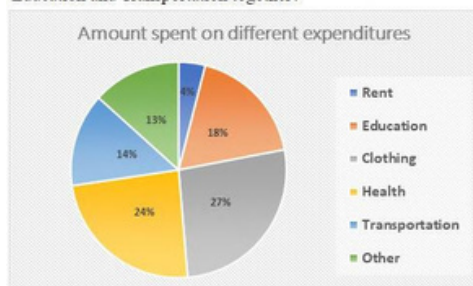
2. $\frac{x - 10}{x + 4}$

3. $\frac{x + 10}{x - 4}$

4. $\frac{x - 10}{x - 4}$

Question ID : 2643305818
Status : 2 Answered
Chosen Option : 1

Q.19 The following figure shows the expenditures incurred by Rohan in different heads. Rohan has a monthly income of ₹50,000 out of which he spends 60% on different expenditures. What is the total expenditure (in ₹) incurred on Health, Education and Transportation together?



Ans 1. Rs.16,800

2. Rs.15,800

3. Rs.28,000

4. Rs.18,000

Question ID : 2643306335
Status : 3 Answered
Chosen Option : 3

Q.20 What is the third proportional of 6 and 18?

- Ans
- 1. 36
 - 2. 42
 - 3. 54
 - 4. 48

Question ID : 2643305822
Status : 6 Answered
Chosen Option : 3

Q.21 The mean weight (in kg) of four students is 30. The weights of three of them are 42 kg, 28 kg, and 24 kg. What is the weight (in kg) of the fourth student?

- Ans
- 1. 25
 - 2. 26
 - 3. 32
 - 4. 41

Question ID : 2643305819
Status : 7 Answered
Chosen Option : 3

Q.2 ₹21,000 is lent at compound interest of 10% p.a. for three years. Find the amount.

- 2
- 1. ₹27,951
- Ans
- 2. ₹6,951
 - 3. ₹27,000
 - 4. ₹28,951

Question ID : 2643306168
Status : 0 Answered
Chosen Option : 3

Q.23 A student wants to know the area of a rhombus, one of whose diagonals is 6 cm. He measures another diagonal as 8 cm. What is the area of the rhombus?

- Ans
- 1. 25 cm²
 - 2. 20 cm²
 - 3. 24 cm²
 - 4. 48 cm²

Question ID : 2643305715
Status : 4 Answered
Chosen Option : 2

Q.24 A person received a yearly salary hike of 15%, 20%, and 25% in 3 successive years. What is the total salary of the person after 3 years if his initial salary was Rs.20,000?

- Ans
- 1. Rs.30,000
 - 2. Rs.35,000
 - 3. Rs.32,500
 - 4. Rs.34,500

Question ID : 2643305839
Status : 9 Answered
Chosen Option : 3

Q.25 The sum of three prime numbers is 90. If one of them exceeds another by 30, then one of the numbers is:

- Ans
- 1. 41
 - 2. 67
 - 3. 47
 - 4. 59

Question ID : 2643306337
Status : 3 Answered
Chosen Option : 3

Section : General Awareness

Q.1 Which is NOT correct about the Directive Principles of the State Policy?

- Ans
- 1. They are mentioned in Part IV of the Constitution of India.
 - 2. They aim to establish a welfare state in India.
 - 3. They are a novel feature of the Constitution of India.
 - 4. They are justiciable in nature.

Question ID : 2643307713
Status : 0 Answered
Chosen Option : 4

Q.2 What happens to the magnetic field produced by a given current in the conductor when the distance increases?

- Ans
- 1. It stops
 - 2. It increases
 - 3. It decreases
 - 4. It stays the same

Question ID : 2643307724
Status : 3 Answered
Chosen Option : 3

Q.3 In Union Budget 2021-22, PLI schemes for 13 key sectors of manufacturing starting from fiscal year (FY) 2021-22 have been announced. The full form of PLI is:

- Ans
- 1. Performance Linked Incentive
 - 2. Performance Liability Indemnity
 - 3. Production License Indemnity
 - 4. Production Linked Incentive

Question ID : 2643307740
Status : 8 Answered
Chosen Option : 1

Q.4 Which is NOT correct about the original jurisdiction of the Supreme Court?

- Ans
- 1. It can hear any dispute between two or more states.
 - 2. It can hear any dispute between the Government of India and any state or states on one side and one or more states on the other.
 - 3. It can hear ordinary dispute of commercial nature between the Government of India and the states
 - 4. It can hear any dispute between the Government of India and one or more states.

Question ID : 2643307711
Status : 8 Answered
Chosen Option : 3

Q.5A

According to the Census of India 2011, what is the percentage of the urban population?

- Ans
- 1. 31.16%
 - 2. 27.78%
 - 3. 23.34%
 - 4. 25.71%

Question ID : 2643306716
Status : 3 Answered
Chosen Option : 1

Q.6 The Reserve Bank of India (RBI) has introduced a PCA framework for large non-banking financial companies (NBFCs) with effect from October 2022, putting restrictions whenever vital financial metrics dip below the prescribed threshold. What is PCA?

- Ans
- 1. Prompt Coordinated Action
 - 2. Prompt Corrective Action
 - 3. Phased Coordinated Action
 - 4. Phased Corrective Action

Question ID : 2643307731
Status : 2 Answered
Chosen Option : 2

Q.7 _____ introduced the daroga system, replacing zamindari thanedars under the direct control of the district head and on its payroll.

- Ans
- 1. Lord Minto I
 - 2. Lord Cornwallis
 - 3. Lord Hastings
 - 4. Lord Wellesley

Question ID : 2643307700
Status : 6 Answered
Chosen Option : 2

Q.8 According to poverty statistics in India (2011-12), what is the percentage of population in Chandigarh, below the poverty line?

- Ans
- 1. 21.81%
 - 2. 2.77%
 - 3. 9.91%
 - 4. 9.86%

Question ID : 26433067166
Status : Marked For Review
Chosen Option : 2

Q.9 The Vidhava Viva w ha Uttejaka Mandal (Society for Encouragement of Widow Marriage)as established in _____ in the second half of the nineteenth century.

- Ans
- 1. Calcutta Presidency
 - 2. Bombay Presidency
 - 3. the Central Provinces
 - 4. the United Provinces

Question ID : 2643307703
Status : 3 Answered
Chosen Option : 1

Q.10 Which of the following statements about Bharat Naujawan Sabha is INCORRECT?

- Ans
- 1. It was founded in Punjab.
 - 2. Bhagat Singh became its founding secretary.
 - 3. It was established in 1927.
 - 4. It started political work among the youth, peasants, and workers.

Question ID : 2643307703
Status : 8 Answered
Chosen Option : 2

Q.11 Deficiency of which vitamin causes symptoms like tingling in the tongue, anaemia, white patches on the skin, mouth ulcers and shortness of breath?

- Ans
- 1. Vitamin K
 - 2. Vitamin B12
 - 3. Vitamin E
 - 4. Vitamin B1

Question ID : 2643307729
Status : 0 Answered
Chosen Option : 2

Q.12 Who among the following was the Wazir of Sultan Iltutmish?

- Ans
- 1. Sai'd Fakhr-I-Mudabbir
 - 2. Malik Naik
 - 3. Nizam ul-Mulk Junaidi
 - 4. Nusrat Khan

Question ID : 26433077057
Status : Marked For Review
Chosen Option : 1

Q.13 Which of the following launched 'SAGE' initiative on 4 June 2021?

- Ans
- 1. Ministry of Education
 - 2. NITI Aayog
 - 3. Ministry of Women and Child Welfare
 - 4. Ministry of Social Justice and Empowerment

Question ID : 26433077401
Status : Not Answered
Chosen Option : --

Q.14 Which is the most suitable soil for growing coffee in India?

- Ans
- 1. Black Soil
 - 2. Red Soil
 - 3. Laterite soil
 - 4. Alluvial Soil

Question ID : 2643307698
Status : 0 Answered
Chosen Option : 1

Q.15 Shikoor Khan, Pandit Ram Narayan, Ramesh Mishra, Sultan Khan and Ustad Binda Khan are noted players of which of the following instruments?

- Ans
- 1. Rudra veena
 - 2. Santoor
 - 3. Sarangi
 - 4. Jal-tarang

Question ID : 26433076880
Status : Marked For Review
Chosen Option : 2

Q.16 Who is recognised as the founder of the Lucknow Gharana of Kathak?

- Ans
- 1. Birju Maharaj
 - 2. Ishwari Prasad
 - 3. Rukmini Devi
 - 4. Sitara Devi

Question ID : 2643307164
Status : 2 Answered
Chosen Option : 1

Q.17 Which of the following dances is traditionally performed by tea cultivators in Assam?

- Ans
- 1. Bihu
 - 2. Deodhani
 - 3. Jhumur
 - 4. Bhortal Nritya

Question ID : 2643307690
Status : 4 Answered
Chosen Option : 1

Q.18 Who is the head of the committee constituted by the Central Government to consider the withdrawal of AFSPA from Nagaland?

- Ans
- 1. Ajay Kumar Bhalla
 - 2. Vivek Joshi
 - 3. Rajiv Gauba
 - 4. Piyush Goyal

Question ID : 26433077405
Status : Marked For Review
Chosen Option : 2

Q.19 Bu

builders of which of the following temples had constructed a 4 km long incline for placing 90 tonnes of stone on top of the tallest shikhara amongst the

- Ans
- 1. The Sun Temple
 - 2. Rajarajeshvara Temple
 - 3. Kandhariya Mahadeva Temple
 - 4. Gangadikondha Temple

Question ID : 26433076892
Status : Not Answered
Chosen Option : --

Q.20 In the 1920s, who created the Left-Step Periodic Table (LSPT) of the chemical elements, basing the positions of the elements on patterns in the arrangement of electrons around the atomic nucleus?

- Ans
- 1. Glenn Seaborg
 - 2. Lothar Meyer
 - 3. Charles Janet
 - 4. Dmitri Mendeleev

Question ID : 2643307725
Status : 0 Answered
Chosen Option : 1

Q.21 Who among the following as the Governor administered the oath to the CM of Assam, Himanta Biswa Sarma, in 2021?

- Ans
- 1. Padmanabha Balakrishna Acharya
 - 2. Ganga Prasad
 - 3. Jagdeep Dhankhar
 - 4. Jagdish Mukhi

Question ID : 2643307735
Status : 4 Answered
Chosen Option : 4

Q.22 Which mineral found in Koderma and Giridih districts of Jharkhand is used for power industry, paint and pigment industry etc.?

- Ans
- 1. Quartz
 - 2. Mica
 - 3. Asbestos
 - 4. Kyanite

Question ID : 2643307727
Status : 5 Answered
Chosen Option : 2

Q.23 Who among the following is NOT appointed by the President of India?

- Ans
- 1. Ambassadors and High Commissioners
 - 2. Comptroller and Auditor General of India
 - 3. Attorney General of India
 - 4. Solicitor General of India

Question ID : 2643307712
Status : 2 Answered
Chosen Option : 1

Q.24 W here is the headquarters of Food Corporation of India located?

- Ans
- 1. Kolkata
 - 2. New Delhi
 - 3. Hyderabad
 - 4. Bhubaneswar

Question ID : 2643307699
Status : 7 Answered
Chosen Option : 2

Q.25 The Champaran Mela is celebrated every year in which city of Chhattisgarh?

- Ans
- 1. Bilaspur
 - 2. Raipur
 - 3. Raigarh
 - 4. Korna

Question ID : 26433076932
Status : Marked For Review
Chosen Option : 4