

Exam Date	04/08/2022
Exam Time	11:45 AM - 12:45 PM
Subject	Selection Post Phase X Graduate Level

Section : General Intelligence

Q.1 Which letter-cluster will replace the question mark (?) and complete the given series?  
VEIL, XGKJ, ?, BKOF, DMQD

- Ans
- 1. ZINH
  - 2. ZIMH
  - 3. ZJMH
  - 4. ZING

Question ID : 2643307820  
Status : 0 Answered  
Chosen Option : 2

Q.2 Select the option that represents the letters which when sequentially placed from left to right in the blanks below will complete the letter series.

G \_ D \_ A \_ F D \_ A I F \_ \_ A \_ F D S \_

- Ans
- 1. FSGSDSGA
  - 2. FSHSDSJA
  - 3. F
  - 4. FT
  - GSDSGA

Question ID : 2643306754  
Status : 2 Answered  
Chosen Option : 2

Q.3 In a certain code language, 'CIRCLE' is written as 'VMGIPG' and 'ANGLES' is written as 'KREWIP'. How will 'SHAPES' be written in that language?

- Ans
- 1. ELVVIT
  - 2. ELWWJT
  - 3. ELWWIT
  - 4. ELUWIT

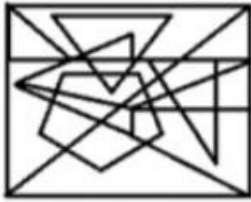
Question ID : 26433078168  
Status : Not Answered  
Chosen Option : --

Q.4 Select the option figure in which the given figure is embedded (rotation is NOT allowed).

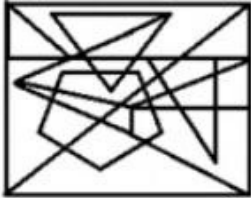


Ans

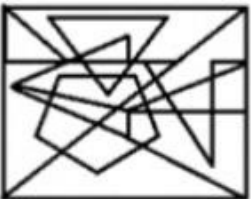
✓ 1.



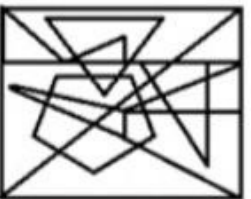
✗ 2.



✗ 3.



✗ 4.



Question ID : 2643307850  
Status : 4 Answered  
Chosen Option : 1

Q.5 Select the option that represents the correct order of the given words as they would appear in an English dictionary.

1. Median
2. Mediation
3. Mediate
4. Medicine
5. Medical
6. Mechanics

Ans ✓ 1. 6, 1, 3, 2, 5, 4

✗ 2. 6, 1, 2, 3, 5, 4

✗ 3. 6, 1, 3, 5, 2, 4

✗ 4. 6, 1, 3, 2, 4, 5

Question ID : 2643307814  
Status : 9 Answered  
Chosen Option : 1

Q.6 In a certain code language, 'LIFT' is written as 'MKGU' and 'HEIGHT' is written as 'GKHIU'. How will 'WEIGHT' be written in that language?

- Ans
- 1. XGKHIU
  - 2. XKIUHG
  - 3. IKXGHU
  - 4. UIHKGX

Question ID : 26433077995  
Status : Not Answered  
Chosen Option : --

Q.7 Three statements are followed by three conclusions numbered I, II and III. You have to consider these statements to be true, even if they seem to be at variance with commonly known facts. Decide which of the given conclusions logically follow/s from the given statements.

Statements:

Some engineers are teachers.

Some teachers are doctors.

All doctors are intelligent.

Conclusions:

(I) Some engineers are doctors.

(II) Some intelligent are engineers.

(III) Some teachers are intelligent.

- Ans
- 1. Only conclusion III follows.
  - 2. Conclusions I, II and III
  - 3. Only conclusion II follows
  - 4. Only conclusion I follows.

Question ID : 2643307815  
Status : 2 Answered  
Chosen Option : 1

Q.8 'A # B' means 'A is the brother of B'.  
'A @ B' means 'A is the daughter of B'.  
'A & B' means 'A is the husband of B'.  
'A % B' means 'A is the wife of B'.

If S % D # F @ G & H @ J,  
then how is F related to H?

- Ans
- 1. Daughter
  - 2. Son's wife
  - 3. Mother
  - 4. Daughter's daughter

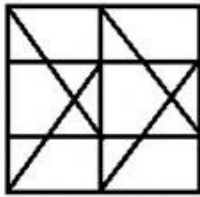
Question ID : 2643307824  
Status : 5 Answered  
Chosen Option : 1

Q.9 Select the option in which the given figure is embedded (rotation is NOT allowed).

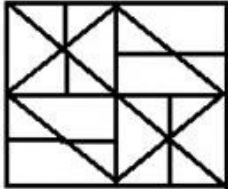


Ans

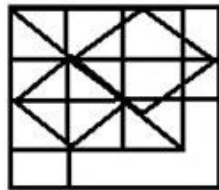
✗ 1.



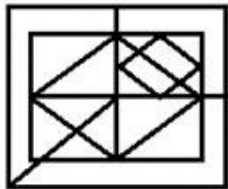
✗ 2.



✓ 3.



✗ 4.

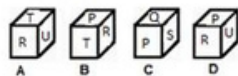
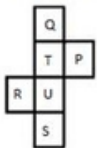


Question ID : 2643306897

Status : 8 Answered

Chosen Option : 3

Q.10 If the following sheet is folded to form a cube, which of the given figures are possible?



Ans ✗ 1. Only C and B

✗ 2. Only A and D

✗ 3. Only C and D

✓ 4. Only A and C

Question ID : 2643307845

Status : 5 Answered

Chosen Option : 4

Q.11

Select the option that is related to the third word in the same way as the second word related to the first word.  
Naive : Ingenuous :: Intelligible : ?

- Ans
- 1. Natural
  - 2. Unworthy
  - 3. Difficult
  - 4. Understandable

Question ID : 2643307780  
Status : 9 Answered  
Chosen Option : 4

Q.12 Select the word-pair that best represents a similar relationship to the one expressed in the pair of words given below. (The words must be considered as meaningful English words and must not be related to each other based on the number of letters/number of consonants/vowels in the word)  
Carpenter : Furniture

- Ans
- 1. Doctor : Hospital
  - 2. Teacher : Pencil
  - 3. Chef : Food
  - 4. Sailor : Ship

Question ID : 2643306597  
Status : 6 Answered  
Chosen Option : 2

Q.13 In a certain code language, 'GUITAR' is written as 'UGSHAJ' and 'PIANO' is written as 'LSANM'. How will 'DRUMS' be written in that language?

- Ans
- 1. IOGJX
  - 2. XIOGJ
  - 3. XGOIJ
  - 4. XJGOI

Question ID : 26433070331  
Status : Not Answered  
Chosen Option : --

Q.14 Select the option that represents the correct order of the given words as they would appear in an English dictionary. (Note: the given words may or may not be meaningful words).

1. Generation
2. Govern
3. Gender
4. Geothermal
5. Generous

- Ans
- 1. 3, 1, 5, 4, 2
  - 2. 2, 1, 5, 4, 3
  - 3. 3, 1, 5, 2, 4
  - 4. 2, 1, 5, 3, 4

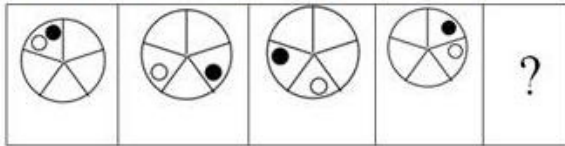
Question ID : 2643307807  
Status : 5 Answered  
Chosen Option : 1

Q.15 Select the set in which the numbers are related in the same way as are the numbers of the following sets. (NOTE : Operations should be performed on the whole numbers, without breaking down the numbers into its constituent digits. E.g. 13 – Operations on 13 such as adding /deleting /multiplying etc. to 13 can be performed. Breaking down 13 into 1 and 3 and then performing mathematical operations on 1 and 3 is NOT allowed)

- Ans
- ✓ 1. (8, 60, 15)
  - ✗ 2. (23, 204, 26)
  - ✗ 3. (10, 92, 17)
  - ✗ 4. (12, 85, 15)

Question ID : 2643307866  
 Status : 1 Answered  
 Chosen Option : 1

Q.16 Select the figure that will come next in the following figure series.



- Ans
- ✗ 1.
  - ✓ 2.
  - ✗ 3.
  - ✗ 4.

Question ID : 2643307847  
 Status : 1 Answered  
 Chosen Option : 1

Q.17 In a certain code language, 'HEIGHT' is written as '51' and 'FULL' is written as '47'. How will 'DISH' be written in that language?

- Ans
- ✗ 1. 33
  - ✗ 2. 34
  - ✗ 3. 35
  - ✓ 4. 36

Question ID : 2643307803  
 Status : 4 Answered  
 Chosen Option : 4

Q.18In ac

In certain code language, 'FINGER' is written as '31' and 'HOLIDAY' is written as '24'. How will 'WHOLE' be written in that language?

- Ans
- 1. 33
  - 2. 43
  - 3. 23
  - 4. 63

Question ID : 26433067571  
Status : Not Answered  
Chosen Option : --

Q.19Select the word-pair that best represents a similar relationship to the one expressed in the pair of words given below.

(The words must be considered as meaningful English words and must not be related to each other based on the number of letters/number of consonants/vowels in the word.)

Marker : Whiteboard

- Ans
- 1. Type : Letters
  - 2. Table : Chair
  - 3. Door : Latches
  - 4. Pen : Paper

Question ID : 2643307741  
Status : 6 Answered  
Chosen Option : 4

Q.20Which of the following numbers will replace the question mark (?) in the given series?

8, 15, 25, 38, ?, 73

- Ans
- 1. 70
  - 2. 54
  - 3. 45
  - 4. 61

Question ID : 2643307871  
Status : 6 Answered  
Chosen Option : 2

Q.21'ENT 2' is related to 'FPW 4' in a certain way. In the same way, 'OPD 5' is related to 'PRG 10'. Which of the following is related to 'FAH 6' using the same logic?

- Ans
- 1. ECE 3
  - 2. EYE 3
  - 3. EYE 12
  - 4. DYE 3

Question ID : 2643307794  
Status : 0 Answered  
Chosen Option : 3

Q.22Krish defeated the only brother of the daughter of his paternal grandmother while p laying a board game, how is the defeated person related to Krish's mother?

- Ans
- 1. Son
  - 2. Husband
  - 3. Brother
  - 4. Father

Question ID : 2643306917  
Status : 7 Answered  
Chosen Option : 4

Q.23In a certain code language, 'nature is beautiful' is written as '11 33 44', 'sunlight is bright' is written as '33 66 77' and 'sunlight represents nature' is written as '66 11 99'. What is the code for the word 'bright' in that language?

- Ans
- 1. 99
  - 2. 33
  - 3. 77
  - 4. 66

Question ID : 2643307780  
Status : 7 Answered  
Chosen Option : 3

Q.24Three statements are given, followed by three conclusions numbered I, II and III. Assuming the statements to be true, even if they seem to be at variance with commonly known facts, decide which of the conclusions logically follow(s) from the statements.

Statement :

All shoes are slippers.  
All slippers are socks.  
All socks are sandals

Conclusions:

(I) Some sandals are slippers  
(II) Some socks are shoes.  
(III) All sandals are shoes.

- Ans
- 1. Both Conclusion I and II follow.
  - 2. Both Conclusion I and III follow.
  - 3. Both Conclusion II and III follow.
  - 4. Only Conclusion I follows.

Question ID : 2643306895  
Status : 5 Answered  
Chosen Option : 1

Q.25Which two numbers (not the digits of the numbers) and two signs should be interchanged to make the given equation correct?  
 $10 \div 2 \times 6 - 15 + 5 = 25$

- Ans
- 1. 2 and 6; + and  $\times$
  - 2. 2 and 15;  $\div$  and  $\times$
  - 3. 10 and 5; + and -
  - 4. 5 and 2; + and -

Question ID : 2643306761  
Status : 1 Answered  
Chosen Option : 4



Q.15 Select the option that expresses the given sentence in passive voice.  
Stevie loved a good mystery novel.

- Ans
- 1. A good mystery novel is loved by Stevie.
  - 2. A good mystery novel was being loved by Stevie.
  - 3. A good mystery novel was loved by Stevie.
  - 4. A good mystery novel had been loved by Stevie.

Question ID : 2643305907  
Status : 1 Answered  
Chosen Option : 3

Q.2 Select the option that expresses the given sentence in indirect speech.  
He said, "I have got the prize".

- Ans
- 1. He said that he had got the prize.
  - 2. He said that I had got the prize.
  - 3. He said that he has got the prize.
  - 4. He said, he have got the prize.

Question ID : 2643307545  
Status : 4 Answered  
Chosen Option : 1

Q.3 Select the sentences that contains no spelling errors.

- Ans
- 1. Meenakshi, a former councillor, is aspiring for a ticket to contest the elections.
  - 2. Meenakshi, a former counciler, is aspiring for a ticket to contest the elections.
  - 3. Meenakshi, a former councilor, is aspiring for a ticket to contest the elections.
  - 4. Meenakshi, a former councilior, is aspiring for a ticket to contest the elections.

Question ID : 2643306086  
Status : 4 Answered  
Chosen Option : 3

Q.4 In the given sentence, a word is given in brackets. Select the most appropriate ANTONYM of the word to fill in the blank.  
Having a bath in the Ganges is considered as a/an \_\_\_\_\_ (unholy) thing in Indian culture.

- Ans
- 1. unerring
  - 2. pure
  - 3. sacred
  - 4. pleasant

Question ID : 2643305847  
Status : 3 Answered  
Chosen Option : 3

Q.5 Select the INCORRECTLY spelt word.

- Ans
- 1. Postumous
  - 2. Garrison
  - 3. Pedestrian
  - 4. Threshold

Question ID : 2643306019  
Status : 5 Answered  
Chosen Option : 1

Q.65 Select the option that expresses the given sentence in direct speech.  
Shyam said that he would go into surgery the following day.

- Ans
- 1. Shyam said, "He will go into surgery tomorrow."
  - 2. Shyam said, "I will go into surgery the day after tomorrow."
  - 3. Shyam said, "He would go into surgery tomorrow."
  - 4. Shyam said, "I will go into surgery tomorrow."

Question ID : 2643305905  
Status : 7 Answered  
Chosen Option : 4

Q.7 Select the option that expresses the given sentence in passive voice.

Jeremy took Andrew to the hospital.

- Ans
- 1. Andrew was taken to the hospital by Jeremy.
  - 2. The hospital is taken to Andrew by Jeremy.
  - 3. Andrew is taken to the hospital by Jeremy.
  - 4. Andrew took Jeremy to the hospital.

Question ID : 2643305906  
Status : 8 Answered  
Chosen Option : 1

Q.8 Select the option that will improve the underlined part of the given sentence. In case no improvement is needed, select 'No improvement required'.

Sarah writes a book that became a bestseller.

- Ans
- 1. will write a book
  - 2. No improvement required
  - 3. had write a book
  - 4. wrote a book

Question ID : 2643306075  
Status : 9 Answered  
Chosen Option : 4

Q.9 Select the most appropriate idiom from the following options that can substitute the underlined part of the given sentence.

Dheerubai, a source of inspiration to the present generation, started life very poor and then later in life became very rich. \_\_\_\_\_

- Ans
- 1. Felt the pinch
  - 2. Got it off his chest
  - 3. Dragged his feet
  - 4. Went from rags to riches

Question ID : 2643305845  
Status : 5 Answered  
Chosen Option : 4

Q.10 S

Select the most appropriate option to substitute the underlined segment in the given sentence.  
Rupak visits his mother on a regular basis.

- Ans
- 1. daily
  - 2. everyday
  - 3. regularly
  - 4. weekly

Question ID : 2643306084  
Status : 9 Answered  
Chosen Option : 2

Q.11 Select the most appropriate meaning of the underlined word.

The report claimed that a consensus was growing against the absolute authority in the country.

- Ans
- 1. Systematically collected laws
  - 2. Difference of opinion
  - 3. Centre of attraction
  - 4. Generally accepted agreement

Question ID : 2643305863  
Status : 1 Answered  
Chosen Option : 4

Q.12 Select the most appropriate synonym of the given word.

Compunction

- Ans
- 1.
  - Punishment
  - 2. Scruples
  - 3. Scepticism
  - 4. Grief

Question ID : 26433059140  
Status : Marked For Review  
Chosen Option : 2

Q.13 Select the most appropriate option to fill in the blank.

Recycling is a key component of modern waste reduction and is the third component of the 'Reduce, Reuse and Recycle' waste hierarchy. \_\_\_\_\_ aim is to extract the maximum practical benefits from products and to generate the minimum amount of waste.

- Ans
- 1. whom
  - 2. whose
  - 3. which
  - 4. who's

Question ID : 2643306077  
Status : 7 Answered  
Chosen Option : 2

Q.14T

The following sentence has been split into four segments. Identify the segment that contains a grammatical error.

After the thieves / had left, / George crept slow / out of his room.

Ans

- 1. had left
- 2. After the thieves
- 3. out of his room
- 4. George crept slow

Question ID : 2643306146  
Status : 6 Answered  
Chosen Option : 4

Q.15 Select the most appropriate option to fill in the blank.

New York \_\_\_\_\_ its roots back to 1624, when it was founded as a trading post by colonists of the Dutch Republic.

Ans

- 1. traces
- 2. dates
- 3. sketches
- 4. recalls

Question ID : 2643306077  
Status : 0 Answered  
Chosen Option : 4

Comprehension:

In the following passage, some words have been deleted. Read the passage carefully and select the most appropriate option to fill in each blank.

In the village of Wall, men wore brown and grey, and even the reddest neckerchief worn by the ruddiest of farmers was soon (1) \_\_\_\_\_ by the sun and the rain makes a more (2) \_\_\_\_\_ colour. Due to this, it would (3) \_\_\_\_\_ easily. While clothes do not make the man and fine feathers do not make (4) \_\_\_\_\_. However, Thorn was not the same man that he had been. There was a swagger (5) \_\_\_\_\_ his steps.

SubQuestion No : 16

Q.16 Select the most appropriate option to fill in blank number 1.

Ans

- 1. lighted
- 2.
- smothered
- 3. lightened
- 4. covered

Question ID : 2643305883  
Status : 6 Answered  
Chosen Option : 3

Comprehension:

In the following passage, some words have been deleted. Read the passage carefully and select the most appropriate option to fill in each blank.

In the village of Wall, men wore brown and grey, and even the reddest neckerchief worn by the ruddiest of farmers was soon (1) \_\_\_\_\_ by the sun and the rain makes a more (2) \_\_\_\_\_ colour. Due to this, it would (3) \_\_\_\_\_ easily. While clothes do not make the man and fine feathers do not make (4) \_\_\_\_\_. However, Thorn was not the same man that he had been. There was a swagger (5) \_\_\_\_\_ his steps.

SubQuestion No : 17

Q.17 Select the most appropriate option to fill in blank number 2.

- Ans
- 1. soft
  - 2.
  - boorish
  - 3. vibrant
  - 4. loutish

Question ID : 2643305883  
Status : 7 Answered  
Chosen Option : 3

Comprehension:

In the following passage, some words have been deleted. Read the passage carefully and select the most appropriate option to fill in each blank.

In the village of Wall, men wore brown and grey, and even the reddest neckerchief worn by the ruddiest of farmers was soon (1) \_\_\_\_\_ by the sun and the rain makes a more (2) \_\_\_\_\_ colour. Due to this, it would (3) \_\_\_\_\_ easily. While clothes do not make the man and fine feathers do not make (4) \_\_\_\_\_. However, Thorn was not the same man that he had been. There was a swagger (5) \_\_\_\_\_ his steps.

SubQuestion No : 18

Q.18 Select the most appropriate option to fill in blank number 3.

- Ans
- 1. crumple and crease
  - 2. cut and crack
  - 3. loosen and hang
  - 4. rip and tear

Question ID : 2643305883  
Status : 8 Answered  
Chosen Option : 4

Comprehension:

In the following passage, some words have been deleted. Read the passage carefully and select the most appropriate option to fill in each blank.

In the village of Wall, men wore brown and grey, and even the reddest neckerchief worn by the ruddiest of farmers was soon (1) \_\_\_\_\_ by the sun and the rain makes a more (2) \_\_\_\_\_ colour. Due to this, it would (3) \_\_\_\_\_ easily. While clothes do not make the man and fine feathers do not make (4) \_\_\_\_\_. However, Thorn was not the same man that he had been. There was a swagger (5) \_\_\_\_\_ his steps.

SubQuestion No : 19

Q.19 Select the most appropriate option to fill in blank number 4.

- Ans
- 1. finest
  - birds 2. falter
  - birds 3. finer
  - birds 4. fine
- birds

Question ID : 2643305883  
Status : 9 Answered  
Chosen Option : 4

### Comprehension:

In the following passage, some words have been deleted. Read the passage carefully and select the most appropriate option to fill in each blank.

In the village of Wall, men wore brown and grey, and even the reddest neckerchief worn by the ruddiest of farmers was soon (1) \_\_\_\_\_ by the sun and the rain makes a more (2) \_\_\_\_\_ colour. Due to this, it would (3) \_\_\_\_\_ easily. While clothes do not make the man and fine feathers do not make (4) \_\_\_\_\_. However, Thorn was not the same man that he had been. There was a swagger (5) \_\_\_\_\_ his steps.

SubQuestion No : 20

Q.20 Select the most appropriate option to fill in blank number 5.

- Ans
- 1.
  - into
  - 2. to
  - 3. of
  - 4. in

Question ID : 2643305884  
Status : 0 Answered  
Chosen Option : 4

### Comprehension:

Read the given passage and answer the questions that follow.

The search for life on Mars has become more urgent thanks in part to probes by the two rovers now roaming Mars' surface and another spaceship that is orbiting the planet. In recent months, they've made a series of astonishing discoveries that, once again, tempt scientists to believe that Mars harbours life—or did so in the past. At a February conference in the Netherlands, an audience of Mars experts was surveyed about Martian life. Some 75 per cent of the scientists said they thought life once existed there, and of them, 25 per cent think that Mars harbours life today.

SubQuestion No : 21

Q.21 Select the most appropriate ANTONYM of the given word.

Astonishing

- Ans
- 1. Ordinary
  - 2. Real
  - 3. Superb
  - 4. Vague

Question ID : 2643307191  
Status : 5 Answered  
Chosen Option : 1

### Comprehension:

Read the given passage and answer the questions that follow.

The search for life on Mars has become more urgent thanks in part to probes by the two rovers now roaming Mars' surface and another spaceship that is orbiting the planet. In recent months, they've made a series of astonishing discoveries that, once again, tempt scientists to believe that Mars harbours life—or did so in the past. At a February conference in the Netherlands, an audience of Mars experts was surveyed about Martian life. Some 75 per cent of the scientists said they thought life once existed there, and of them, 25 per cent think that Mars harbours life today.

SubQuestion No : 22

Q.22 Identify the inference drawn from the passage.

- Ans
- 1. A minimal percentage of Mars expert believe there is life on Mars today.
  - 2. There have been few discoveries. about life on Mars
  - 3. There used to be life on Mars.
  - 4. There is life on Mars today.

Comprehension:

Read the given passage and answer the questions that follow.

The search for life on Mars has become more urgent thanks in part to probes by the two rovers now roaming Mars' surface and another spaceship that is orbiting the planet. In recent months, they've made a series of astonishing discoveries that, once again, tempt scientists to believe that Mars harbours life—or did so in the past. At a February conference in the Netherlands, an audience of Mars experts was surveyed about Martian life. Some 75 per cent of the scientists said they thought life once existed there, and of them, 25 per cent think that Mars harbours life today.

SubQuestion No : 23

Q.23 Select an appropriate title for the passage.

- Ans
- 1. Research on Mars
  - 2. The Probability of Life on Mars
  - 3. Martians
  - 4. Mars

Question ID : 2643307191  
Status : 1 Answered  
Chosen Option : 2

Comprehension:

Read the given passage and answer the questions that follow.

The search for life on Mars has become more urgent thanks in part to probes by the two rovers now roaming Mars' surface and another spaceship that is orbiting the planet. In recent months, they've made a series of astonishing discoveries that, once again, tempt scientists to believe that Mars harbours life—or did so in the past. At a February conference in the Netherlands, an audience of Mars experts was surveyed about Martian life. Some 75 per cent of the scientists said they thought life once existed there, and of them, 25 per cent think that Mars harbours life today.

SubQuestion No : 24

Q.24 Which of the following facts is mentioned in the given passage?

- Ans
- 1. Life once existed on Mars
  - 2. Life exists now on Mars
  - 3. There are two rovers probing Mars surface.
  - 4. No discoveries were made regarding Mars

Question ID : 2643307191  
Status : 2 Answered  
Chosen Option : 3

Comprehension:

Read the given passage and answer the questions that follow.

The search for life on Mars has become more urgent thanks in part to probes by the two rovers now roaming Mars' surface and another spaceship that is orbiting the planet. In recent months, they've made a series of astonishing discoveries that, once again, tempt scientists to believe that Mars harbours life—or did so in the past. At a February conference in the Netherlands, an audience of Mars experts was surveyed about Martian life. Some 75 per cent of the scientists said they thought life once existed there, and of them, 25 per cent think that Mars harbours life today.

SubQuestion No : 25

Q.25 Identify the tone of the passage.

- Ans
- 1. Biased
  - 2. Speculative
  - 3. Technical
  - 4. Acerbic

Question ID : 2643307191  
Status : 4 Answered  
Chosen Option : 2

Q.1 Find the volume of a rectangular box whose dimensions are 2 m, 3 m and 4 m.

- Ans
- 1. 24 m<sup>3</sup>
  - 2. 12 m<sup>3</sup>
  - 3. 18 m<sup>3</sup>
  - 4. 9 m<sup>3</sup>

Question ID : 2643305841  
Status : 6 Answered  
Chosen Option : 1

Q.2 In an office, 80% workers are men while 20% are women. The average age of the men is 30 and the average age of the women is 40. What is the average age of all the workers in that office?

- Ans
- 1. 50
  - 2. 32
  - 3. 30
  - 4. 35

Question ID : 2643306164  
Status : 1 Answered  
Chosen Option : 2

Q.3 What is the value of 'm', so that the number 56m02 is divisible by 3?

- Ans
- 1. 1
  - 2. 0
  - 3. 3
  - 4. 2

Question ID : 2643306163  
Status : 2 Answered  
Chosen Option : 4

Q.4 If  $\cos \theta = \frac{5}{13}$ , what is the value of  $\cot \theta$ ?

- Ans
- 1.  $\frac{5}{12}$
  - 2.  $\frac{13}{12}$
  - 3.  $\frac{12}{13}$
  - 4.  $\frac{5}{13}$

Question ID : 2643306170  
Status : 9 Answered  
Chosen Option : 1



Q.5 If the mean proportional between 5 and 125 is  $x$  and the mean proportional between 44 and 62 is  $y$ , find the value of  $2x : y$ .

- Ans
- 1. 25 : 48
  - 2. 25 : 128
  - 3. 25 : 64
  - 4. 25 : 96

Question ID : 2643306166  
Status : 8 Answered  
Chosen Option : 1

Q.6 The area of the sector of a circle with radius 4 cm and of angle  $30^\circ$  is (take  $\pi = 3.14$ ):

- Ans
- 1. 4.19 sq.cm
  - 2. 4.49 sq.cm
  - 3. 4.39 sq.cm
  - 4. 4.29 sq.cm

Question ID : 2643305688  
Status : 3 Answered  
Chosen Option : 1

Q.7 The income of an employee is 30% more than his expenditure. If his income decreases by 10% and his expenditure increases by 3%, then by what per cent does his savings decrease or increase?

- Ans
- 1.  $48\frac{1}{3}\%$  increase
  - 2.  $52\frac{1}{4}\%$  decrease
  - 3.  $53\frac{1}{3}\%$  decrease
  - 4.  $50\frac{1}{4}\%$  increase

Question ID : 2643306113  
Status : 9 Answered  
Chosen Option : 3

Q.8 If  $x - \frac{1}{x} = \frac{15}{4}$ , find the value of  $x + \frac{1}{x}$ .

- Ans
- 1.  $\frac{21}{4}$
  - 2.  $\frac{15}{4}$
  - 3.  $\frac{17}{4}$
  - 4.  $\frac{13}{4}$

Question ID : 2643305717  
Status : 3 Answered  
Chosen Option : 3

Q.9 The ratio of income to expenditure of a person is 5 : 2. What percentage of his income he saving?

- Ans
- 1. 60%
  - 2. 52%
  - 3. 40%
  - 4. 55%

Question ID : 2643306165  
Status : 4 Answered  
Chosen Option : 1

Q.10 The population of a town increases by 20% annually. If its present population is 15000, what will be the population in 2 years?

- Ans
- 1. 21600
  - 2. 21400
  - 3. 21300
  - 4. 21500

Question ID : 2643305868  
Status : 5 Answered  
Chosen Option : 1

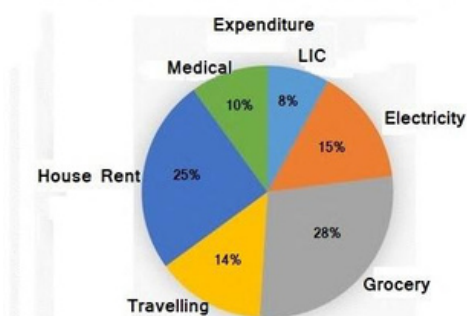
Q.11 If a reduction of 10% in the price of rice enables a person to obtain 22kg more for Rs.250, then the original price of rice per kg is \_\_\_\_\_.

- Ans
- 1. Rs.1.20
  - 2. Rs.1.22
  - 3. Rs.1.24
  - 4. Rs.1.26

Question ID : 2643306120  
Status : 1 Answered  
Chosen Option : 4

Q.12 Study the given pie-chart and answer the question that follows.

The pie-chart shows the expenditure of a family in percentage. The total monthly income is ₹60,000.



After the expenditure on only LIC and travelling, find the total income that remains?

- Ans
- 1. ₹46,500
  - 2. ₹46,700
  - 3. ₹46,600
  - 4. ₹46,800

Question ID : 2643306343  
Status : 1 Answered  
Chosen Option : 4

Q.13 The following table shows the number of students in different streams in 5 departments. Study the table carefully and answer the question based on the table.

Stream	Department				
	A	B	C	D	E
Physics	400	500	350	300	600
Chemistry	750	600	700	500	450
Mathematics	350	400	450	500	750
Computer Science	250	300	380	550	600

Which department has the minimum number of students in all streams?

- Ans
- 1. D
  - 2. C
  - 3. A
  - 4. B

Q.14 Given that  $\triangle MAN$  and  $\triangle CPT$  are congruent to each other such that  $\angle M = 75^\circ$ ,  $\angle N = 65^\circ$ ,  $\angle A = 40^\circ$ ,  $\angle C = x/2$ ,  $\angle P = 6y + 16$ . Find the value of  $(x - 5y)$ .

- Ans
- 1. 130
  - 2. 125
  - 3. 135
  - 4. 120

Question ID : 2643306170  
 Status : 6 Answered  
 Chosen Option : 1

Q.15 A bus during its journey travels 60 min at a speed of 80 km/h, another 90 min at a speed of 100 km/h and 4 hours at a certain speed. If the average speed of the bus during its whole journey is 70 km/h, what is the speed of the bus during the 4 hours?

- Ans
- 1. 70.00 km/h
  - 2. 62.35 km/h
  - 3. 67.75 km/h
  - 4. 56.25 km/h

Question ID : 2643306168  
 Status : 7 Answered  
 Chosen Option : 4

Q.1 What must be subtracted from  $x^3 - 3x^2y + 3xy^2 - y^3$  to get  $x^3 - y^3$ ?

- 6
- Ans
- 1.  $-3x^2y + 3xy^2$
  - 2.  $3x^2y - 3xy^2$
  - 3.  $x^3 - y^3$
  - 4.  $-x^3 + y^3$

Question ID : 2643305818  
 Status : 3 Answered  
 Chosen Option : 1

Q.17 Mohan sells fruits at their cost price but uses a weight of 850 gm in place of 1 kg. What is his profit percentage?

Ans

- 1.  $17\frac{11}{15}\%$
- 2.  $19\frac{11}{17}\%$
- 3.  $15\frac{11}{17}\%$
- 4.  $17\frac{11}{17}\%$

Question ID : 2643306166  
Status : 1 Answered  
Chosen Option : 4

Q.18 A can complete a task in 18 days and B can complete the same task in 32 days. They start working together but B works only for 8 days. Thereafter, the work is completed by A. If they received Rs.8,800 after completion of the work, then what is A's share (in Rs.)?

Ans

- 1. 7200
- 2. 6400
- 3. 5500
- 4. 6600

Question ID : 2643306324  
Status : 6 Answered  
Chosen Option : 4

Q.19 A shopkeeper offers the following two discount schemes on the sale of a watch having marked price ₹3,600.

(1) Two successive discounts of 15%.

(2) A discount of 10% followed by a discount of 20%.

What is the difference between the selling price of the watch in case (1) and case (2)?

Ans

- 1. ₹8
- 2. ₹9
- 3. ₹10
- 4. ₹11

Question ID : 2643306166  
Status : 5 Answered  
Chosen Option : 2

Q.20 In a Hindi test of 100 marks, 11 students got 78 marks, 7 students got 80 marks, 5 students got 82 marks and 2 students got 86 marks. What was the average marks in Hindi?

Ans

- 1. 84
- 2. 86
- 3. 82
- 4. 80

Question ID : 2643306163  
Status : 9 Answered  
Chosen Option : 4

Q.21 If the number 756534P57Q is divisible by 72, then find the value of 2P + Q.  
 Ans  1. 16

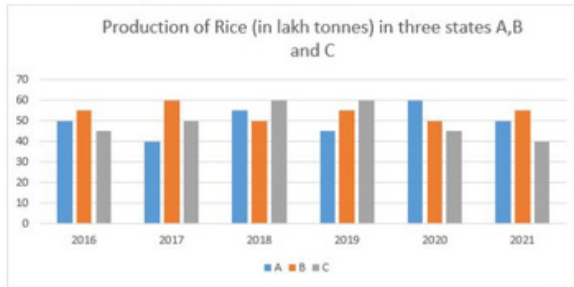
2. 15

3. 18

4. 17

Question ID : 2643306163  
 Status : 3 Answered  
 Chosen Option : 3

Q.22 Study the given graph and answer the question that follows.



The total rice production of state A in 2016 and 2017 is what percentage of the total rice production of state C in 2018 and 2019?

Ans  1. 5%

2. 120%

3. 20%

4. 75%

Question ID : 2643306510  
 Status : 3 Answered  
 Chosen Option : 4

Q.23 If  $a - b = 10$  and  $ab = 4$ , then the value of  $a^3 - b^3 + 4(a+b)^2$  is:

Ans  1. 1500

2. 1584

3. 1280

4. 1623

Question ID : 2643305844  
 Status : 9 Answered  
 Chosen Option : 2

Q.24 The value of the expression  $\frac{4\sin^2 30^\circ + \cos^2 60^\circ - \tan^2 45^\circ}{2\sin 60^\circ \cos 30^\circ - \tan 45^\circ}$  is:

Ans  1.  $\frac{1}{2}$

2. 1

3.  $\frac{1}{4}$

4.  $\frac{1}{\sqrt{2}}$

Question ID : 2643305843  
 Status : 6 Answered  
 Chosen Option : 1

Q.25 T hird proportional of 9 and 24 is:  
Ans  1. 64

- 2. 72
- 3. 48
- 4. 36

Question ID : 2643306333  
Status : 0 Answered  
Chosen Option : 1

Section : General Awareness

Q.1 Which Rashtrakuta king adopted title of Jagat Tunga (prominent in the world)?

- Ans  1. Krishnaraja I  
 2. Govinda III  
 3. Dhruva  
 4. Indra II

Question ID : 26433077061  
Status : Not Answered  
Chosen Option : --

Q.2 The Central Universities (Amendment) Bill, 2021 seeks to establish a Central University in which of the following states/ Union territories?

- Ans  1. Gujarat  
 2. Andaman and  
 Nicobar 3. Ladakh  
 4. Kashmir

Question ID : 2643307734  
Status : 5 Answered  
Chosen Option : 4

Q.3 According to the Indian Councils Act 1861, for purposes of the legislation, the Governor-General's Council was reinforced by Additional members, not less than six and not more than twelve in number to be nominated by the Governor-General and holding office for:

- Ans  1. three years  
 2. two years  
 3. six years  
 4. five years

Question ID : 2643307700  
Status : 5 Answered  
Chosen Option : 3

Q.4 According to the 2011 census, which of the following forms the largest religious minority in India?

- Ans  1. Muslims  
 2. Jains  
 3.  
 Christians  
4. Sikhs

Question ID : 2643305496  
Status : 2 Answered  
Chosen Option : 2

Q.5T

o o which part of the Constitution of India was the Right to Property added after it wasmitted from the chapter of the Fundamental Rights?

- Ans
- 1. Part XII
  - 2. Part XI
  - 3. Part XIII
  - 4. Part XX

Question ID : 26433077094  
Status : Marked For Review  
Chosen Option : 2

Q.6Where is Salim Ali National Park located in India?

- Ans
- 1. Kanha
  - 2. Corbett
  - 3. Bhadra
  - 4. Srinagar

Question ID : 26433076973  
Status : Marked For Review  
Chosen Option : 4

Q.7The proportion of workers in the agriculture sector in India has seen a decline in decades 2001 to 2011, which is a major cause of unemployment. Select the correct option with reference to the agriculture sector decline.

- Ans
- 1. 49.7% to 44.7%
  - 2. 68.2% to 54.6%
  - 3. 48.2% to 44.6%
  - 4. 58.2% to 54.6%

Question ID : 26433067169  
Status : Not Answered  
Chosen Option : --

Q.8In 1915, who wrote and published the ground-breaking book: 'The Origin of Continents and Oceans', which discusses the motion of Earth's continents?

- Ans
- 1. Harry Hess
  - 2. Alfred Wegener
  - 3. Edward Backus
  - 4. Louis Bauer

Question ID : 26433077274  
Status : Not Answered  
Chosen Option : --

Q.9When was air transport nationalised in India?

- Ans
- 1. 1953
  - 2. 1950
  - 3. 1952
  - 4. 1951

Question ID : 26433076989  
Status : Not Answered  
Chosen Option : --

Q.10 Wh

L ich is a peptide hormone secreted from the alpha cells of the pancreatic islets ofangerhans that is used along with emergency medical treatment blood sugar?

- Ans
- 1. Calcitonin
  - 2.
  - Erythropoietin
  - 3. Melatonin
  - 4. Glucagon

Question ID : 2643307728  
Status : 7 Answered  
Chosen Option : 4

Q.11Vinegar can be used as food preservative due to the presence of \_\_\_\_\_.

- Ans
- 1. acetic acid
  - 2. formic acid
  - 3. propionic acid
  - 4. carboxylic acid

Question ID : 2643305492  
Status : 9 Answered  
Chosen Option : 1

Q.12Which of the following Acts was NOT passed during the tenure of Viceroy Lord Lytton?

- Ans
- 1. The Vernacular Press Act
  - 2. The Arms Act
  - 3. The Royal Titles Act
  - 4. The Indian Telegraph Act

Question ID : 2643307704  
Status : 7 Answered  
Chosen Option : 1

Q.13What was the theme chosen by the Government of India for the 75th Independence Day?

- Ans
- 1. One Country, One People
  - 2. Support our Troops, Salute our
  - Troops 3. Atmanirbhar Bharat
  - 4. Nation First, Always First

Question ID : 2643307694  
Status : 1 Answered  
Chosen Option : 3

Q.14In 1912, who proposed the 'vitamin hypothesis', the concept that the deficiency diseases of beriberi, scurvy, pellagra and rickets are caused by the absence of specific chemical substances (in trace amounts) in the diet?

- Ans
- 1. Jonas Salk
  - 2. Casimir Funk
  - 3. David
  - Baltimore 4. Albert Sabin

Question ID : 2643307728  
Status : 6 Answered  
Chosen Option : 2



Q.15 W

What is the name of the global summit for Climate Change 2021 in which Indian PM pledged net zero emissions target?

- Ans
- 1. UN Climate Change Conference of the Parties
  - 2. Paris Agreement
  - 3. Davos Agenda Summit
  - 4. UN Framework Convention on Climate Change

Question ID : 26433077337  
Status : Marked For Review  
Chosen Option : 1

Q.16 In \_\_\_\_\_, Swami Dayananda Saraswati opened a branch of the Arya Samaj at Lahore.

- Ans
- 1. 1876
  - 2. 1875
  - 3. 1877
  - 4. 1878

Question ID : 26433077030  
Status : Not Answered  
Chosen Option : --

Q.17 Who was the Governor of Punjab when Shri Charanjit Singh Channi took Oath as the Chief Minister?

- Ans
- 1. Smt. Vidya Sinha
  - 2. Shri Banwarilal Purohit
  - 3. Smt. Anandi Ben
  - 4. Shri Bhagat Singh Koshyari

Question ID : 26433077389  
Status : Marked For Review  
Chosen Option : 3

Q.18 Which country won the Gold in women's 25m pistol team event at the ISSF World Cup 2021 held at New Delhi?

- Ans
- 1. Kazakhstan
  - 2. India
  - 3. Poland
  - 4. Denmark

Question ID : 26433077366  
Status : Not Answered  
Chosen Option : --

Q.19 Who among the following Indian Cricketers is the autobiographer of 'Believe: What Life and Cricket Taught Me'?

- Ans
- 1. Suresh Raina
  - 2. Sachin Tendulkar
  - 3. Rahul Dravid
  - 4. Virat Kohli

Question ID : 2643307692  
Status : 6 Answered  
Chosen Option : 1

Q.20 When was the three-language policy implemented in India?

- Ans
- 1. 1969
  - 2. 1971
  - 3. 1968
  - 4. 1970

Question ID : 26433077119  
Status : Not Answered  
Chosen Option : --

Q.21 What is a Dzong in Buddhist architecture?

- Ans
- 1. King's palace
  - 2. Local residences
  - 3. Guesthouse
  - 4. Fortress - Monastery

Question ID : 2643307082  
Status : 3 Answered  
Chosen Option : 1

Q.22 Which of the following forms of dance is performed by Kumudini Lakhia ?

- Ans
- 1. Kathak
  - 2. Kathakali
  - 3. Manipuri
  - 4. Bharatanatyam

Question ID : 26433071640  
Status : Not Answered  
Chosen Option : --

Q.23 In order to stand for Lok Sabha election, a candidate must be at least:

- Ans
- 1. 21 years old
  - 2. 25 years old
  - 3. 35 years old
  - 4. 30 years old

Question ID : 2643305410  
Status : 3 Answered  
Chosen Option : 2

Q.24 The Padma Shri 2022 awardee duo of Nalini and Kamalini Asthana are known for which gharana of Kathak dance?

- Ans
- 1. Lucknow
  - 2. Benaras
  - 3. Rajgarh
  - 4. Jaipur

Question ID : 26433076901  
Status : Not Answered  
Chosen Option : --

Q.25 Unique school visit campaign 'Meet the Champions' was jointly organised by which of the following ministries?

Ans  1. Ministry of Education and Ministry of Youth Affairs

2. Ministry of Youth and Ministry of Ayush

3. Ministry of Youth Affairs and Ministry of Women and Child

4. Ministry of Education and Ministry of Women and Child Welfare

Question ID : 2643307739  
Status : 7 Answered  
Chosen Option : 1

Q.12 Find the ratio of the curved surface area to the total surface area of a cylinder with diameter of base 14 cm and height 10 cm.

Ans

- 1.  $\frac{11}{17}$
- 2.  $\frac{5}{17}$
- 3.  $\frac{13}{17}$
- 4.  $\frac{10}{17}$

Question ID : 2643306170  
Status : 3 Answered  
Chosen Option : 3

Q.13 P buys an article for Rs.280 and sells it to Q at a profit of 25%. Q sells it to R at some profit. R sells it to S for Rs.560 making a profit of 40%. What percentage profit (rounded off to the nearest integer) did Q make?

Ans

- 1. 26 Percent
- 2. 14 Percent
- 3. 32 Percent
- 4. 20 Percent

Question ID : 2643306320  
Status : 7 Answered  
Chosen Option : 3

Q.14 Study the given table and answer the question that follows.

The table shows the production (in thousands) of four different types of tractors by a company during five years.

Year/Tractor Type	Type - A	Type - B	Type - C	Type - D
2010	18	25	12	19
2011	15	24	14	10
2012	23	13	17	13
2013	17	23	12	11
2014	14	26	20	18

Which type of tractor has same production in the years 2010 and 2013?

Ans

- 1. Type - B
- 2. Type - C
- 3. Type - A
- 4. Type - D

Question ID : 2643306169  
Status : 5 Answered  
Chosen Option : 2

Q.15 What is the average of the following observations?

2.5, 3.25, 4.75, 7.5, 3, 4, 3

Ans

- 1. 3.5
- 2. 4.18
- 3. 4.5
- 4. 4

Question ID : 2643305819  
Status : 6 Answered  
Chosen Option : 4

Q.16 What is the fourth proportional of 21, 56 and 27?

Ans  1. 72

2. 81

3. 54

4. 96

Question ID : 2643306333  
Status : 2 Answered  
Chosen Option : 1

Q.17 Only two candidates were contesting against each other in an election of a village. One candidate got 43.5% votes and was defeated by 3744 votes. How many votes did the winning candidate get?

Ans  1. 16500

2. 16272

3. 15275

4. 16200

Question ID : 2643306165  
Status : 1 Answered  
Chosen Option : 3

Q.18 If  $P = \frac{x^2 - 100}{x^2 - 16}$  and  $Q = \frac{x + 10}{x - 4}$ , then the value of  $\frac{P}{Q}$  is:

Ans  1.  $\frac{x + 10}{x + 4}$

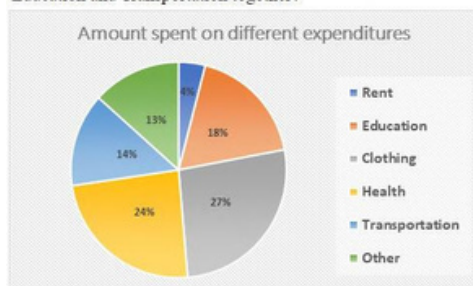
2.  $\frac{x - 10}{x + 4}$

3.  $\frac{x + 10}{x - 4}$

4.  $\frac{x - 10}{x - 4}$

Question ID : 2643305818  
Status : 2 Answered  
Chosen Option : 1

Q.19 The following figure shows the expenditures incurred by Rohan in different heads. Rohan has a monthly income of ₹50,000 out of which he spends 60% on different expenditures. What is the total expenditure (in ₹) incurred on Health, Education and Transportation together?



Ans  1. Rs.16,800

2. Rs.15,800

3. Rs.28,000

4. Rs.18,000

Question ID : 2643306335  
Status : 3 Answered  
Chosen Option : 3

Q.20 What is the third proportional of 6 and 18?

- Ans
- 1. 36
  - 2. 42
  - 3. 54
  - 4. 48

Question ID : 2643305822  
Status : 6 Answered  
Chosen Option : 3

Q.21 The mean weight (in kg) of four students is 30. The weights of three of them are 42 kg, 28 kg, and 24 kg. What is the weight (in kg) of the fourth student?

- Ans
- 1. 25
  - 2. 26
  - 3. 32
  - 4. 41

Question ID : 2643305819  
Status : 7 Answered  
Chosen Option : 3

Q.2 ₹21,000 is lent at compound interest of 10% p.a. for three years. Find the amount.

- 2
- 1. ₹27,951
- Ans
- 2. ₹6,951
  - 3. ₹27,000
  - 4. ₹28,951

Question ID : 2643306168  
Status : 0 Answered  
Chosen Option : 3

Q.23 A student wants to know the area of a rhombus, one of whose diagonals is 6 cm. He measures another diagonal as 8 cm. What is the area of the rhombus?

- Ans
- 1. 25 cm<sup>2</sup>
  - 2. 20 cm<sup>2</sup>
  - 3. 24 cm<sup>2</sup>
  - 4. 48 cm<sup>2</sup>

Question ID : 2643305715  
Status : 4 Answered  
Chosen Option : 2

Q.24 A person received a yearly salary hike of 15%, 20%, and 25% in 3 successive years. What is the total salary of the person after 3 years if his initial salary was Rs.20,000?

- Ans
- 1. Rs.30,000
  - 2. Rs.35,000
  - 3. Rs.32,500
  - 4. Rs.34,500

Question ID : 2643305839  
Status : 9 Answered  
Chosen Option : 3

Q.25 The sum of three prime numbers is 90. If one of them exceeds another by 30, then one of the numbers is:

- Ans
- 1. 41
  - 2. 67
  - 3. 47
  - 4. 59

Question ID : 2643306337  
Status : 3 Answered  
Chosen Option : 3

Section : General Awareness

Q.1 Which is NOT correct about the Directive Principles of the State Policy?

- Ans
- 1. They are mentioned in Part IV of the Constitution of India.
  - 2. They aim to establish a welfare state in India.
  - 3. They are a novel feature of the Constitution of India.
  - 4. They are justiciable in nature.

Question ID : 2643307713  
Status : 0 Answered  
Chosen Option : 4

Q.2 What happens to the magnetic field produced by a given current in the conductor when the distance increases?

- Ans
- 1. It stops
  - 2. It increases
  - 3. It decreases
  - 4. It stays the same

Question ID : 2643307724  
Status : 3 Answered  
Chosen Option : 3

Q.3 In Union Budget 2021-22, PLI schemes for 13 key sectors of manufacturing starting from fiscal year (FY) 2021-22 have been announced. The full form of PLI is:

- Ans
- 1. Performance Linked Incentive
  - 2. Performance Liability Indemnity
  - 3. Production License Indemnity
  - 4. Production Linked Incentive

Question ID : 2643307740  
Status : 8 Answered  
Chosen Option : 1

Q.4 Which is NOT correct about the original jurisdiction of the Supreme Court?

- Ans
- 1. It can hear any dispute between two or more states.
  - 2. It can hear any dispute between the Government of India and any state or states on one side and one or more states on the other.
  - 3. It can hear ordinary dispute of commercial nature between the Government of India and the states
  - 4. It can hear any dispute between the Government of India and one or more states.

Question ID : 2643307711  
Status : 8 Answered  
Chosen Option : 3

Q.5A

According to the Census of India 2011, what is the percentage of the urban population?

- Ans
- 1. 31.16%
  - 2. 27.78%
  - 3. 23.34%
  - 4. 25.71%

Question ID : 2643306716  
Status : 3 Answered  
Chosen Option : 1

Q.6 The Reserve Bank of India (RBI) has introduced a PCA framework for large non-banking financial companies (NBFCs) with effect from October 2022, putting restrictions whenever vital financial metrics dip below the prescribed threshold. What is PCA?

- Ans
- 1. Prompt Coordinated Action
  - 2. Prompt Corrective Action
  - 3. Phased Coordinated Action
  - 4. Phased Corrective Action

Question ID : 2643307731  
Status : 2 Answered  
Chosen Option : 2

Q.7 \_\_\_\_\_ introduced the daroga system, replacing zamindari thanedars under the direct control of the district head and on its payroll.

- Ans
- 1. Lord Minto I
  - 2. Lord Cornwallis
  - 3. Lord Hastings
  - 4. Lord Wellesley

Question ID : 2643307700  
Status : 6 Answered  
Chosen Option : 2

Q.8 According to poverty statistics in India (2011-12), what is the percentage of population in Chandigarh, below the poverty line?

- Ans
- 1. 21.81%
  - 2. 2.77%
  - 3. 9.91%
  - 4. 9.86%

Question ID : 26433067166  
Status : Marked For Review  
Chosen Option : 2



Q.9 The Vidhava Viva w ha Uttejaka Mandal (Society for Encouragement of Widow Marriage)as established in \_\_\_\_\_ in the second half of the nineteenth century.

- Ans
- 1. Calcutta Presidency
  - 2. Bombay Presidency
  - 3. the Central Provinces
  - 4. the United Provinces

Question ID : 2643307703  
Status : 3 Answered  
Chosen Option : 1

Q.10 Which of the following statements about Bharat Naujawan Sabha is INCORRECT?

- Ans
- 1. It was founded in Punjab.
  - 2. Bhagat Singh became its founding secretary.
  - 3. It was established in 1927.
  - 4. It started political work among the youth, peasants, and workers.

Question ID : 2643307703  
Status : 8 Answered  
Chosen Option : 2

Q.11 Deficiency of which vitamin causes symptoms like tingling in the tongue, anaemia, white patches on the skin, mouth ulcers and shortness of breath?

- Ans
- 1. Vitamin K
  - 2. Vitamin B12
  - 3. Vitamin E
  - 4. Vitamin B1

Question ID : 2643307729  
Status : 0 Answered  
Chosen Option : 2

Q.12 Who among the following was the Wazir of Sultan Iltutmish?

- Ans
- 1. Sai'd Fakhr-I-Mudabbir
  - 2. Malik Naik
  - 3. Nizam ul-Mulk Junaidi
  - 4. Nusrat Khan

Question ID : 26433077057  
Status : Marked For Review  
Chosen Option : 1

Q.13 Which of the following launched 'SAGE' initiative on 4 June 2021?

- Ans
- 1. Ministry of Education
  - 2. NITI Aayog
  - 3. Ministry of Women and Child Welfare
  - 4. Ministry of Social Justice and Empowerment

Question ID : 26433077401  
Status : Not Answered  
Chosen Option : --

Q.14 Which is the most suitable soil for growing coffee in India?

- Ans
- 1. Black Soil
  - 2. Red Soil
  - 3. Laterite soil
  - 4. Alluvial Soil

Question ID : 2643307698  
Status : 0 Answered  
Chosen Option : 1

Q.15 Shikoor Khan, Pandit Ram Narayan, Ramesh Mishra, Sultan Khan and Ustad Binda Khan are noted players of which of the following instruments?

- Ans
- 1. Rudra veena
  - 2. Santoor
  - 3. Sarangi
  - 4. Jal-tarang

Question ID : 26433076880  
Status : Marked For Review  
Chosen Option : 2

Q.16 Who is recognised as the founder of the Lucknow Gharana of Kathak?

- Ans
- 1. Birju Maharaj
  - 2. Ishwari Prasad
  - 3. Rukmini Devi
  - 4. Sitara Devi

Question ID : 2643307164  
Status : 2 Answered  
Chosen Option : 1

Q.17 Which of the following dances is traditionally performed by tea cultivators in Assam?

- Ans
- 1. Bihu
  - 2. Deodhani
  - 3. Jhumur
  - 4. Bhortal Nritya

Question ID : 2643307690  
Status : 4 Answered  
Chosen Option : 1

Q.18 Who is the head of the committee constituted by the Central Government to consider the withdrawal of AFSPA from Nagaland?

- Ans
- 1. Ajay Kumar Bhalla
  - 2. Vivek Joshi
  - 3. Rajiv Gauba
  - 4. Piyush Goyal

Question ID : 26433077405  
Status : Marked For Review  
Chosen Option : 2

Q.19 Bu

builders of which of the following temples had constructed a 4 km long incline for placing 90 tonnes of stone on top of the tallest shikhara amongst the

- Ans
- 1. The Sun Temple
  - 2. Rajarajeshvara Temple
  - 3. Kandhariya Mahadeva Temple
  - 4. Gangadikondha Temple

Question ID : 26433076892  
Status : Not Answered  
Chosen Option : --

Q.20 In the 1920s, who created the Left-Step Periodic Table (LSPT) of the chemical elements, basing the positions of the elements on patterns in the arrangement of electrons around the atomic nucleus?

- Ans
- 1. Glenn Seaborg
  - 2. Lothar Meyer
  - 3. Charles Janet
  - 4. Dmitri Mendeleev

Question ID : 2643307725  
Status : 0 Answered  
Chosen Option : 1

Q.21 Who among the following as the Governor administered the oath to the CM of Assam, Himanta Biswa Sarma, in 2021?

- Ans
- 1. Padmanabha Balakrishna Acharya
  - 2. Ganga Prasad
  - 3. Jagdeep Dhankhar
  - 4. Jagdish Mukhi

Question ID : 2643307735  
Status : 4 Answered  
Chosen Option : 4

Q.22 Which mineral found in Koderma and Giridih districts of Jharkhand is used for power industry, paint and pigment industry etc.?

- Ans
- 1. Quartz
  - 2. Mica
  - 3. Asbestos
  - 4. Kyanite

Question ID : 2643307727  
Status : 5 Answered  
Chosen Option : 2

Q.23 Who among the following is NOT appointed by the President of India?

- Ans
- 1. Ambassadors and High Commissioners
  - 2. Comptroller and Auditor General of India
  - 3. Attorney General of India
  - 4. Solicitor General of India

Question ID : 2643307712  
Status : 2 Answered  
Chosen Option : 1

Q.24 W here is the headquarters of Food Corporation of India located?

- Ans
- 1. Kolkata
  - 2. New Delhi
  - 3. Hyderabad
  - 4. Bhubaneswar

Question ID : 2643307699  
Status : 7 Answered  
Chosen Option : 2

Q.25 The Champaran Mela is celebrated every year in which city of Chhattisgarh?

- Ans
- 1. Bilaspur
  - 2. Raipur
  - 3. Raigarh
  - 4. Korna

Question ID : 26433076932  
Status : Marked For Review  
Chosen Option : 4