

Exam Date	03/08/2022
Exam Time	11:45 AM - 12:45 PM
Subject	Selection Post Phase X Matriculation Level

Section : General Intelligence

Q.1 Pointing to a girl in a photograph, Kapil said, "My wife's son is the father of that person." How is that person related to Kapil?

- Ans
- 1. Sister
 - 2. Daughter
 - 3. Son's wife
 - 4. Son's daughter

Question ID : 2643305566
Status : 5 Answered
Chosen Option : 4

Q.2 Two statements are given, followed by two conclusions numbered I and II. Assuming the statements to be true, even if they seem to be at variance with commonly known facts, decide which of the conclusions logically follow(s) from the statements.

Statements:

All goods are services.

No service is a duty.

Conclusions:

I. Atleast some goods are duties.

II. No good is a duty.

- Ans
- 1. Neither conclusion I nor II follows
 - 2. Only conclusion I follows
 - 3. Only conclusion II follows
 - 4. Both conclusions I and II follow

Question ID : 2643305521
Status : 9 Answered
Chosen Option : 3

Q.3 In a code language, 'WAITER' is written as '@#6£38', 'HOSTEL' is written as '2\$%£3+' and 'WASHED' is written as '@#%239'. How will 'DRAWS' be written in that language?

- Ans
- 1. \$6%@+
 - 2. 98#@%
 - 3. 98%@£
 - 4. \$6#@%

Question ID : 2643305526
Status : 5 Answered
Chosen Option : 2

Q.4W

Which letter-cluster will replace the question mark (?) to complete the given series? KSN, HMQL, JOOJ, ?, NSKF

- Ans
- 1. MRNG
 - 2. LQMH
 - 3. MRNH
 - 4. LQNG

Question ID : 2643305524
Status : 4 Answered
Chosen Option : 2

Q.5 Study the given pattern carefully and select the number that can replace the question mark (?) in it.

First row: 11, 12, 529

Second row: 13, 14, 729

Third row: 15, 16, ?

(NOTE : Operations should be performed on the whole numbers, without breaking down the numbers into its constituent digits. E.g. 13 - Operations on 13 such as adding/deleting/multiplying etc. to 13 can be performed. Breaking down 13 into 1 and 3 and then performing mathematical operations on 1 and 3 is not allowed)

- Ans
- 1. 956
 - 2. 961
 - 3. 934
 - 4. 945

Question ID : 2643306824
Status : 9 Answered
Chosen Option : 2

Q.6 Select the correct option that indicates the arrangement of the following words in a logical and meaningful order. (From top to Bottom)

1. Feet
2. Hand
3. Head
4. Belly
5. Shoulder

- Ans
- 1. 1, 3, 2, 4, 5
 - 2. 3, 5, 2, 4, 1
 - 3. 2, 3, 5, 4, 1
 - 4. 5, 3, 2, 4, 1

Question ID : 2643306775
Status : 0 Answered
Chosen Option : 2

Q.7T

A three statements are given, followed by three conclusions numbered I, II and III. Assuming the statements to be true, even if they seem to be at variance with commonly known facts, decide which of the conclusions logically follow(s) from the statements.

Statements:

Some cats are plates.

All plates are tables.

Some tables are furniture.

Conclusions:

I. Some tables are plates.

II. Some plates are furniture.

III. Some cats are tables.

- Ans
- 1. Only conclusion I and II follow
 - 2. All of the conclusions follow
 - 3. Only conclusion I and III follow
 - 4. Only conclusion II and III follow

Question ID : 2643305622
Status : 1 Answered
Chosen Option : 3

Q.8 In a code language, 'BROAD' is coded as '40' and 'FLUSH' is coded as '66'. How will 'RICKET' be coded in that language?

- Ans
- 1. 76
 - 2. 61
 - 3. 66
 - 4. 85

Question ID : 2643305527
Status : 2 Answered
Chosen Option : 3

Q.9 Which letter-cluster will replace the question mark (?) to complete the given series?
EUGS, ?, HRJP, KOMM, OKQI

- Ans
- 1. FTHR
 - 2. FSIQ
 - 3. FUGS
 - 4. FHSQ

Question ID : 2643305524
Status : 3 Answered
Chosen Option : 1

Q.10 Th

Aree statements are given, followed by three conclusions numbered I, II and III. Assuming the statements to be true, even if they seem to be at variance with commonly known facts, decide which of the conclusions logically follow(s) from the statements.

Statements:

Some bananas are pears.

Some pears are grapes.

All grapes are sour.

Conclusions:

I. All bananas are grapes.

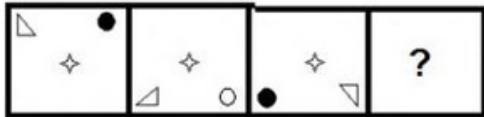
II. Some pears are sour.

III. Some bananas are grapes.

- Ans
- 1. Only conclusion I follows
 - 2. Only conclusion II follows
 - 3. Only conclusion III follows
 - 4. None of the conclusions follows

Question ID : 2643305621
Status : 7 Answered
Chosen Option : 2

Q.11 Select the figure that will replace the question mark (?) in the following figure series.



Ans

- 1.
- 2.
- 3.
- 4.

Question ID : 2643305530
Status : 7 Answered
Chosen Option : 4

Q.12 Which letter-cluster will replace the question mark (?) to complete the given series?

RFTL, ?, VNLH, XRHF, ZVDD

- Ans
- 1. UKPJ
 - 2. TJOI
 - 3. TJPJ
 - 4. UKOI

Question ID : 2643305524
Status : 8 Answered
Chosen Option : 3

Q.13 Select the correct mirror image of the given combination when the mirror is placed at 'PQ' as shown.

RCQF2L
P
Q

Ans

- ✓ 1. J S F Q C R
✗ 2. J S F Q C R
✗ 3. R C Q F 2 L
✗ 4. R C Q F 2 L

Question ID : 2643305683
Status : 8 Answered
Chosen Option : 1

Q.14 Which number will replace the question mark (?) in the following series?
8, 16, 48, ?, 960, 5760

Ans

- ✓ 1. 192
✗ 2. 240
✗ 3. 144
✗ 4. 336

Question ID : 2643305528
Status : 9 Answered
Chosen Option : 1

Q.15 Select the option that represents the correct order of the given words as they would appear in an English dictionary.

1. Geometric
2. Gender
3. Genuine
4. Generous
5. Gene
6. Generator

Ans

- ✓ 1. 2, 5, 6, 4, 3, 1
✗ 2. 2, 6, 5, 4, 3, 1
✗ 3. 1, 2, 5, 6, 4, 3,
✗ 4. 2, 5, 6, 3, 4, 1

Question ID : 2643305672
Status : 1 Answered
Chosen Option : 1

Q.16 'A @ B' means 'A is the husband of B'.
'A & B' means 'A is the mother of B'.
'A # B' means 'A is the daughter of B'.
If P & T @ R # S @ W, then how is W related to T?

Ans

- ✗ 1. Grandmother
✓ 2. Mother-in-law
✗ 3. Mother's sister
✗ 4. Mother's
father

Question ID : 2643305530
Status : 2 Answered
Chosen Option : 2

Q.17 Set the optio

r l e c n that is related to the fifth term in the same way as the second term is related to the first term and the fourth term is related to the third term
HEAVY : YVAEH :: METEOR : ROETEM :: HIGHNESS : ?

- Ans
- 1. SSNEHGIH
 - 2. SSENHIGH
 - 3. SSNEHIGH
 - 4. SSENHGIH

Question ID : 2643305592
Status : 6 Answered
Chosen Option : 4

Q.18 Based on meaning/relevance of the words, Painting is related to Brushes in the same way as Calligraphy is related to _____.

- Ans
- 1. Music
 - 2. Maps
 - 3. Pens
 - 4. Canvas

Question ID : 2643305530
Status : 5 Answered
Chosen Option : 3

Q.19 Which letter-cluster will replace the question mark (?) to complete the given series?
PCXL, ?, TKPH, VOLF, XSHD

- Ans
- 1. RHSJ
 - 2. QGTK
 - 3. QSTJ
 - 4. RGTJ

Question ID : 2643305529
Status : 7 Answered
Chosen Option : 4

Q.20 In a code language, 'SPORTY' is written as 'UQQSVZ' and 'PLANTS' is written as 'RMCQVT'. How will 'BURDEN' be written in that language?

- Ans
- 1. DVTFGP
 - 2. DVTEGO
 - 3. DWTFGP
 - 4. DWUEGO

Question ID : 2643305525
Status : 5 Answered
Chosen Option : 2

Q.21 In a code language, 'PLUCK' is coded as '72' and 'GRAZE' is coded as '78'. How will 'CHARTS' be coded in that language?

- Ans
- 1. 73
 - 2. 93
 - 3. 95
 - 4. 85

Question ID : 2643305526
Status : 9 Answered
Chosen Option : 2

Q.22 Wh

ich two numbers (not the digits of the numbers), from amongst the given options,ould be interchanged to make the given equation correct?
 $13 - 36 + 18 \times 24 \div 6 = 97$

- Ans
- 1. 13 and 24
 - 2. 18 and 6
 - 3. 36 and 24
 - 4. 18 and 36

Question ID : 2643305596
Status : 5 Answered
Chosen Option : 3

Q.23In a certain code language, 'BLUE' is written as '160', and 'RED' is written as '81'. How will 'PINK' be written in that language?

- Ans
- 1. 200
 - 2. 204
 - 3. 196
 - 4. 208

Question ID : 2643305570
Status : 4 Answered
Chosen Option : 1

Q.24In a certain code language, 'ANGER' is written as 'FRJGS', and 'APPLE' is written as 'FTSNF'. How will 'BRAIN' be written in that language?

- Ans
- 1. GVDKO
 - 2. GVCKO
 - 3. GVDJO
 - 4. GVDKP

Question ID : 2643305569
Status : 8 Answered
Chosen Option : 1

Q.25In a code language, 'PERCH' is written as 'SBTAI' and 'BLANK' is written as 'EICLL'.How will 'GLUES' be written in that language?

- Ans
- 1. JIWCT
 - 2. JHXCT
 - 3. JHWBV
 - 4. JIXBV

Question ID : 2643305526
Status : 0 Answered
Chosen Option : 1

Q.15 elect the most appropriate ANTONYM to replace the italicised word.
There was no point in trying to *conceal* the truth now.

- Ans
- 1. cover
 - 2. mask
 - 3. ensconce
 - 4. reveal

Question ID : 2643305964
Status : 9 Answered
Chosen Option : 4

Q.2Select the most appropriate synonym of the given word.

Meagre

- Ans
- 1. Satisfactory
 - 2. Enough
 - 3. Adequate
 - 4. Scanty

Question ID : 2643305963
Status : 9 Answered
Chosen Option : 4

Q.3Substitute one word for the italicised expression.

He did not *make perfectly clear* what was meant by a significant submission.

- Ans
- 1. obscure
 - 2. mystify
 - 3. conceal
 - 4. elucidate

Question ID : 2643305962
Status : 9 Answered
Chosen Option : 4

Q.4Select the option that can be used as a one-word substitute for the given group of words.

A herd of cattle or animals driven in a body.

- Ans
- 1. Herd
 - 2. Grove
 - 3. Drove
 - 4. Brood

Question ID : 2643305970
Status : 1 Answered
Chosen Option : 4

Q.55 elect the most appropriate synonym of the given word.

Cordial

- Ans
- 1. Antagonistic
 - 2. Unfriendly
 - 3. Amicable
 - 4. Hostile

Question ID : 2643305963
Status : 4 Answered
Chosen Option : 3

Q.6Select the most appropriate ANTONYM of the given word.

LIBERTY

- Ans
- 1. dependence
 - 2. independence
 - 3. free will
 - 4. freedom

Question ID : 2643305981
Status : 1 Answered
Chosen Option : 1

Q.7Select the most appropriate option that can substitute the underlined segment in the given sentence.

Can you hope to counting the stars?

- Ans
- 1. you hope to count
 - 2. you hope to be counted
 - 3. you hope to counted
 - 4. you hope to be count

Question ID : 2643305966
Status : 6 Answered
Chosen Option : 1

Q.8Select the most appropriate option that can substitute the underlined segment in the given sentence.

Mahabaleshwar is cool than Panchgani.

- Ans
- 1. is cooler than
 - 2. is coolest than
 - 3. is cold than
 - 4. is cooler then

Question ID : 2643305967
Status : 0 Answered
Chosen Option : 1

Q.9S elect the INCORRECTLY spelt word

Ans 1. Disappointment

2. Agreement

3. Acknowledgement

4. Excitement

Question ID : 2643306023
Status : 7 Answered
Chosen Option : 2

Q.10Select the INCORRECTLY spelt word.

Ans 1. Heirarchy

2. Heiress

3. Ethereal 4.

Notorious

Question ID : 2643306020
Status : 7 Answered
Chosen Option : 1

Q.11Select the option that expresses the given sentence in active voice.

The competition was not being taken seriously by her.

Ans 1. She was not taken the competition seriously

2. She did not take the competition seriously.

3. She has not been taking the competition seriously.

4. She was not taking the competition seriously.

Question ID : 2643306056
Status : 3 Answered
Chosen Option : 4

Q.12Select the option that expresses the given sentence in reported speech.

Shanti said, "Let us come in."

Ans 1. Shanti said that if they are allowed to come in.

2. Shanti told that let them be allowed to come in.

3. Shanti requested that they might be allowed to come in.

4. Shanti requested me to let them come in.

Question ID : 2643307545
Status : 2 Answered
Chosen Option : 2

Q.13Select the INCORRECTLY spelt word.

Ans 1. Reciept

2. Advantage

3. Horror

4. Attitude

Question ID : 2643306041
Status : 6 Answered
Chosen Option : 1

Q.14 Select the most appropriate meaning of the given idiom.

Get your own way

- Ans
1. Allow them to decide how to act, do not control or supervise them
 2. Accept the blame or responsibility alone , even though other people were responsible
 3. Persuade other people to let you do what you want
 4. Do everything they tell you to do, whenever they tell you to do it

Question ID : 26433059766
Status : Not Answered
Chosen Option : --

Q.15 Select the most appropriate meaning of the given idiom.

Bid fair

- Ans
1. Said or done correctly
 2. To seem likely
 3. To pay handsomely
 4. To assume

Question ID : 2643306022
Status : 5 Answered
Chosen Option : 3

Comprehension:

In the following passage, some words have been deleted. Read the passage carefully and select the most appropriate option to fill in each blank.

Once the war was over, Ashoka ventured out to (1) _____ the city and all he could see were burnt houses and scattered corpses. The lethal war with Kalinga transformed the vengeful Emperor Ashoka into a stable and peaceful emperor, and he became a (2) _____ of Buddhism. According to the prominent Indologist, AL Basham, the 'Dharma' officially propagated by Ashoka was not Buddhism at all. Nevertheless, his patronage led to the (3) _____ of Buddhism in the Mauryan empire and other kingdoms during his rule, and worldwide from about 250 BCE. After the Kalinga War and Ashoka's conversion, the Empire experienced nearly half a century of peace and security. Mauryan India also enjoyed an era of social harmony, religious (4) _____ and expansion of the sciences and of knowledge. Chandragupta Maurya's embrace of Jainism increased social and religious renewal and reform across his society, while Ashoka's embrace of Buddhism has been said to have been the (5) _____ of the reign of social and political peace and non-violence across all of India.

SubQuestion No : 16

Q.16 Select the most appropriate option to fill in blank number 1.

- Ans
1. rename
 2. divide
 3. control
 4. roam

Question ID : 2643307174
Status : 5 Answered
Chosen Option : 4

Comprehension:

In the following passage, some words have been deleted. Read the passage carefully and select the most appropriate option to fill in each blank.

Once the war was over, Ashoka ventured out to (1) _____ the city and all he could see were burnt houses and scattered corpses. The lethal war with Kalinga transformed the vengeful Emperor Ashoka into a stable and peaceful emperor, and he became a (2) _____ of Buddhism. According to the prominent Indologist, AL Basham, the 'Dharma' officially propagated by Ashoka was not Buddhism at all. Nevertheless, his patronage led to the (3) _____ of Buddhism in the Mauryan empire and other kingdoms during his rule, and worldwide from about 250 BCE. After the Kalinga War and Ashoka's conversion, the Empire experienced nearly half a century of peace and security. Mauryan India also enjoyed an era of social harmony, religious (4) _____ and expansion of the sciences and of knowledge. Chandragupta Maurya's embrace of Jainism increased social and religious renewal and reform across his society, while Ashoka's embrace of Buddhism has been said to have been the (5) _____ of the reign of social and political peace and non-violence across all of India.

SubQuestion No : 17

Q.17 Select the most appropriate option to fill in blank number 2.

- Ans
- 1. successor
 - 2. patron
 - 3. founder
 - 4. doubter

Question ID : 2643307174
Status : 6 Answered
Chosen Option : 2

Comprehension:

In the following passage, some words have been deleted. Read the passage carefully and select the most appropriate option to fill in each blank.

Once the war was over, Ashoka ventured out to (1) _____ the city and all he could see were burnt houses and scattered corpses. The lethal war with Kalinga transformed the vengeful Emperor Ashoka into a stable and peaceful emperor, and he became a (2) _____ of Buddhism. According to the prominent Indologist, AL Basham, the 'Dharma' officially propagated by Ashoka was not Buddhism at all. Nevertheless, his patronage led to the (3) _____ of Buddhism in the Mauryan empire and other kingdoms during his rule, and worldwide from about 250 BCE. After the Kalinga War and Ashoka's conversion, the Empire experienced nearly half a century of peace and security. Mauryan India also enjoyed an era of social harmony, religious (4) _____ and expansion of the sciences and of knowledge. Chandragupta Maurya's embrace of Jainism increased social and religious renewal and reform across his society, while Ashoka's embrace of Buddhism has been said to have been the (5) _____ of the reign of social and political peace and non-violence across all of India.

SubQuestion No : 18

Q.18 Select the most appropriate option to fill in blank number 3.

- Ans
- 1. modification
 - 2. condemnation
 - 3. expansion
 - 4. emancipation

Question ID : 2643307174
Status : 7 Answered
Chosen Option : 3

Comprehension:

In the following passage, some words have been deleted. Read the passage carefully and select the most appropriate option to fill in each blank.

Once the war was over, Ashoka ventured out to (1) _____ the city and all he could see were burnt houses and scattered corpses. The lethal war with Kalinga transformed the vengeful Emperor Ashoka into a stable and peaceful emperor, and he became a (2) _____ of Buddhism. According to the prominent Indologist, AL Basham, the 'Dharma' officially propagated by Ashoka was not Buddhism at all. Nevertheless, his patronage led to the (3) _____ of Buddhism in the Mauryan empire and other kingdoms during his rule, and worldwide from about 250 BCE. After the Kalinga War and Ashoka's conversion, the Empire experienced nearly half a century of peace and security. Mauryan India also enjoyed an era of social harmony, religious (4) _____ and expansion of the sciences and of knowledge. Chandragupta Maurya's embrace of Jainism increased social and religious renewal and reform across his society, while Ashoka's embrace of Buddhism has been said to have been the (5) _____ of the reign of social and political peace and non-violence across all of India.

SubQuestion No : 19

Q.19 Select the most appropriate option to fill in blank number 4.

Ans 1. transformation

2. affiliation

3. comprehension

4. apprehension

Question ID : 26433071748
Status : Not Answered
Chosen Option : --

Comprehension:

In the following passage, some words have been deleted. Read the passage carefully and select the most appropriate option to fill in each blank.

Once the war was over, Ashoka ventured out to (1) _____ the city and all he could see were burnt houses and scattered corpses. The lethal war with Kalinga transformed the vengeful Emperor Ashoka into a stable and peaceful emperor, and he became a (2) _____ of Buddhism. According to the prominent Indologist, AL Basham, the 'Dharma' officially propagated by Ashoka was not Buddhism at all. Nevertheless, his patronage led to the (3) _____ of Buddhism in the Mauryan empire and other kingdoms during his rule, and worldwide from about 250 BCE. After the Kalinga War and Ashoka's conversion, the Empire experienced nearly half a century of peace and security. Mauryan India also enjoyed an era of social harmony, religious (4) _____ and expansion of the sciences and of knowledge. Chandragupta Maurya's embrace of Jainism increased social and religious renewal and reform across his society, while Ashoka's embrace of Buddhism has been said to have been the (5) _____ of the reign of social and political peace and non-violence across all of India.

SubQuestion No : 20

Q.20 Select the most appropriate option to fill in blank number 5.

Ans 1. foundation

2. retention

3. accession 4.

drawback

Question ID : 2643307174
Status : 9 Answered
Chosen Option : 3

Comprehension:

Read the given passage and answer the questions that follow.

Gutenberg Bible, also called 42-line Bible was the first complete book extant in the West and one of the earliest printed from movable type, so called after its printer, Johannes Gutenberg. Gutenberg completed it in 1455 while working at Mainz, Germany. The three-volume work, in Latin text, was printed in 42-line columns and, in its later stages of production, was worked on by six compositors simultaneously. It is sometimes referred to as the Mazarin Bible because the first copy described by bibliographers was located in the Paris library of Cardinal Mazarin. The Anthology of Great Buddhist Priests' Zen Teachings (1377), also known as Jikji, was printed in Korea 78 years before the Gutenberg Bible and is recognized as the world's oldest extant movable metal type book.

Like other contemporary works, the Gutenberg Bible had no title page, no page numbers, and no innovations to distinguish it from the work of a manuscript copyist. This was presumably the desire of both Gutenberg and his customers. Experts are generally agreed that the Bible, though uneconomic in its use of space, displays a technical efficiency not substantially improved upon before the 19th century. The Gothic type is majestic in appearance, medieval in feeling, and slightly less compressed and less pointed than other examples that appeared shortly thereafter.

The original number of copies of this work is unknown; some 40 are still in existence. There are perfect vellum copies kept in the U.S. Library of Congress, the French Bibliothèque Nationale, and the British Library. In the United States almost complete texts are preserved in the Huntington, Morgan, New York Public, Harvard University, and Yale University libraries.

SubQuestion No : 21

Q.21 Select the most appropriate option to fill in the blank.

The Mazarin Bible derived its name from the _____.

Ans

- 1. Bibliothèque Nationale
- 2. Paris Library
- 3. Library of Congress
- 4. British Library

Question ID : 2643307180

Status : 5 Answered

Chosen Option : 2

Comprehension:

Read the given passage and answer the questions that follow.

Gutenberg Bible, also called 42-line Bible was the first complete book extant in the West and one of the earliest printed from movable type, so called after its printer, Johannes Gutenberg. Gutenberg completed it in 1455 while working at Mainz, Germany. The three-volume work, in Latin text, was printed in 42-line columns and, in its later stages of production, was worked on by six compositors simultaneously. It is sometimes referred to as the Mazarin Bible because the first copy described by bibliographers was located in the Paris library of Cardinal Mazarin. The Anthology of Great Buddhist Priests' Zen Teachings (1377), also known as Jikji, was printed in Korea 78 years before the Gutenberg Bible and is recognized as the world's oldest extant movable metal type book.

Like other contemporary works, the Gutenberg Bible had no title page, no page numbers, and no innovations to distinguish it from the work of a manuscript copyist. This was presumably the desire of both Gutenberg and his customers. Experts are generally agreed that the Bible, though uneconomic in its use of space, displays a technical efficiency not substantially improved upon before the 19th century. The Gothic type is majestic in appearance, medieval in feeling, and slightly less compressed and less pointed than other examples that appeared shortly thereafter.

The original number of copies of this work is unknown; some 40 are still in existence. There are perfect vellum copies kept in the U.S. Library of Congress, the French Bibliothèque Nationale, and the British Library. In the United States almost complete texts are preserved in the Huntington, Morgan, New York Public, Harvard University, and Yale University libraries.

SubQuestion No : 22

Q.22 Select the most appropriate ANTONYM of the given word.

Simultaneously

- Ans
- 1. Passionately
 - 2. Perpetually
 - 3. Reluctantly
 - 4. Consecutively

Question ID : 2643307180

Status : 7 Answered

Chosen Option : 3

Comprehension:

Read the given passage and answer the questions that follow.

Gutenberg Bible, also called 42-line Bible was the first complete book extant in the West and one of the earliest printed from movable type, so called after its printer, Johannes Gutenberg. Gutenberg completed it in 1455 while working at Mainz, Germany. The three-volume work, in Latin text, was printed in 42-line columns and, in its later stages of production, was worked on by six compositors simultaneously. It is sometimes referred to as the Mazarin Bible because the first copy described by bibliographers was located in the Paris library of Cardinal Mazarin. The Anthology of Great Buddhist Priests' Zen Teachings (1377), also known as Jikji, was printed in Korea 78 years before the Gutenberg Bible and is recognized as the world's oldest extant movable metal type book.

Like other contemporary works, the Gutenberg Bible had no title page, no page numbers, and no innovations to distinguish it from the work of a manuscript copyist. This was presumably the desire of both Gutenberg and his customers. Experts are generally agreed that the Bible, though uneconomic in its use of space, displays a technical efficiency not substantially improved upon before the 19th century. The Gothic type is majestic in appearance, medieval in feeling, and slightly less compressed and less pointed than other examples that appeared shortly thereafter.

The original number of copies of this work is unknown; some 40 are still in existence. There are perfect vellum copies kept in the U.S. Library of Congress, the French Bibliothèque Nationale, and the British Library. In the United States almost complete texts are preserved in the Huntington, Morgan, New York Public, Harvard University, and Yale University libraries.

SubQuestion No : 23

Q.23 Identify an appropriate title for the given passage from the following options.

- Ans
- 1. The 42-Line Bible by Gutenberg
 - 2. The First Printing Press by Gutenberg
 - 3. The Preservation of Manuscripts
 - 4. The Bible and Other Contemporary Works

Question ID : 26433071808

Status : Not Answered

Chosen Option : --

Comprehension:

Read the given passage and answer the questions that follow.

Gutenberg Bible, also called 42-line Bible was the first complete book extant in the West and one of the earliest printed from movable type, so called after its printer, Johannes Gutenberg. Gutenberg completed it in 1455 while working at Mainz, Germany. The three-volume work, in Latin text, was printed in 42-line columns and, in its later stages of production, was worked on by six compositors simultaneously. It is sometimes referred to as the Mazarin Bible because the first copy described by bibliographers was located in the Paris library of Cardinal Mazarin. The Anthology of Great Buddhist Priests' Zen Teachings (1377), also known as Jikji, was printed in Korea 78 years before the Gutenberg Bible and is recognized as the world's oldest extant movable metal type book.

Like other contemporary works, the Gutenberg Bible had no title page, no page numbers, and no innovations to distinguish it from the work of a manuscript copyist. This was presumably the desire of both Gutenberg and his customers. Experts are generally agreed that the Bible, though uneconomic in its use of space, displays a technical efficiency not substantially improved upon before the 19th century. The Gothic type is majestic in appearance, medieval in feeling, and slightly less compressed and less pointed than other examples that appeared shortly thereafter.

The original number of copies of this work is unknown; some 40 are still in existence. There are perfect vellum copies kept in the U.S. Library of Congress, the French Bibliothèque Nationale, and the British Library. In the United States almost complete texts are preserved in the Huntington, Morgan, New York Public, Harvard University, and Yale University libraries.

SubQuestion No : 24

Q.24 Where was the first printed book published?

- Ans
- 1. The US
 - 2. Britain
 - 3. Korea
 - 4. Germany

Question ID : 2643307180
Status : 4 Answered
Chosen Option : 4

Comprehension:

Read the given passage and answer the questions that follow.

Gutenberg Bible, also called 42-line Bible was the first complete book extant in the West and one of the earliest printed from movable type, so called after its printer, Johannes Gutenberg. Gutenberg completed it in 1455 while working at Mainz, Germany. The three-volume work, in Latin text, was printed in 42-line columns and, in its later stages of production, was worked on by six compositors simultaneously. It is sometimes referred to as the Mazarin Bible because the first copy described by bibliographers was located in the Paris library of Cardinal Mazarin. The Anthology of Great Buddhist Priests' Zen Teachings (1377), also known as Jikji, was printed in Korea 78 years before the Gutenberg Bible and is recognized as the world's oldest extant movable metal type book.

Like other contemporary works, the Gutenberg Bible had no title page, no page numbers, and no innovations to distinguish it from the work of a manuscript copyist. This was presumably the desire of both Gutenberg and his customers. Experts are generally agreed that the Bible, though uneconomic in its use of space, displays a technical efficiency not substantially improved upon before the 19th century. The Gothic type is majestic in appearance, medieval in feeling, and slightly less compressed and less pointed than other examples that appeared shortly thereafter.

The original number of copies of this work is unknown; some 40 are still in existence. There are perfect vellum copies kept in the U.S. Library of Congress, the French Bibliothèque Nationale, and the British Library. In the United States almost complete texts are preserved in the Huntington, Morgan, New York Public, Harvard University, and Yale University libraries.

SubQuestion No : 25

Q.25 What is Jikji?

- Ans
- 1. World's first complete book in the west
 - 2. Three volume work created by six compositors
 - 3. '42 line Bible' compiled by Johannes Gutenberg
 - 4. World's oldest extant movable metal type book

Question ID : 2643307180
Status : 6 Answered
Chosen Option : 4

Q.1A n athlete crosses 1200 m distance in 9 minutes. What is his speed (in km/h)?

Ans 1. 8

2. 9

3. 7

4. 6

Question ID : 2643305868
Status : 6 Answered
Chosen Option : 1

Q.2Arun is going from Delhi to Mumbai for a business trip. He travelled by train to reach Gandhinagar in 16 hours covering a distance of 920 km. After a break of 2 hours, he took another train from the same place to Mumbai, covering the distance in 12 hours. Arun took a total of 30 hours to cover the entire distance of 1478 km. What was the speed (in km/h) of the train going from Gandhinagar to Mumbai?

Ans 1.

39.85

2. 46.5

3. 53.5

4. 49

Question ID : 2643305820
Status : 2 Answered
Chosen Option : 2

Q.3Find the maximum length of a rod, that can be placed in a room of dimension $12\text{m} \times 14\text{m}$.

Ans 1. 22 m

2. 24 m

3. 23 m

4. 21 m

Question ID : 26433058701
Status : Not Answered
Chosen Option : --

Q.4What is the sum of the mean proportional between 5 and 9.8 and the third proportional to 7 and 14?

Ans 1. 35

2. 32

3. 34

4. 33

Question ID : 2643305867
Status : 5 Answered
Chosen Option : 1

Q.5The third proportional of 5 and 15 is:

Ans 1. 35

2. 40

3. 50

4. 45

Question ID : 2643306348
Status : 5 Answered
Chosen Option : 4

Q.6A

A man borrowed Rs.24,000 and Rs.30,000 at 5% and 9% per annum simple interest, respectively. What amount (in Rs.) will he have to return after 8 years?

- Ans
- 1. 78450
 - 2. 85200
 - 3. 92500
 - 4. 31200

Question ID : 2643306322
Status : 7 Answered
Chosen Option : 4

Q.7 A certain sum of money becomes three times of itself in $5\frac{1}{2}$ years at a certain rate of simple interest. How much time will it take to become six times of itself at the same rate?

- Ans
- 1. 12 years 3 months
 - 2. 15 years 5 months
 - 3. 10 years 6 months
 - 4. 13 years 9 months

Question ID : 26433063226
Status : Not Answered
Chosen Option : --

Q.8 Convert $0.\overline{57}$ into fraction.

- Ans
- 1. $\frac{19}{33}$
 - 2. $\frac{17}{33}$
 - 3. $\frac{57}{33}$
 - 4. $\frac{33}{19}$

Question ID : 2643306344
Status : 7 Answered
Chosen Option : 1

Q.9A can do a piece of work in 12 days, and B can do the same work in 15 days. With the help of C, they can finish the work in 5 days. How long will it take C to finish the work?

- Ans
- 1. 18 days
 - 2. 20 days
 - 3. 17 days
 - 4. 19 days

Question ID : 2643306389
Status : 7 Answered
Chosen Option : 2

Q.10 The number of all prime numbers between 0 and 44 is:

- Ans
- 1. 13
 - 2. 12
 - 3. 11
 - 4. 14

Question ID : 2643306367
Status : 7 Answered
Chosen Option : 2

Q.11 The valuation of a house depreciates at 10% in a year, compared to its value at the beginning of that year. If the current value of the house is Rs.40,00,000, find what the value of the house will be three years from now.

- Ans
- 1. Rs.28,00,000
 - 2. Rs.29,16,000
 - 3. Rs.29,06,000
 - 4. Rs.29,26,000

Question ID : 2643306121
Status : 4 Answered
Chosen Option : 2

Q.12 Shatish sold a music system to Karan at a 25% gain and Karan sold it to Swati at a 30% gain. If Swati paid Rs.12,500 for the music system, what amount did Shatish pay for the same?

- Ans
- 1. Rs.8,692.31
 - 2. Rs.6,802.32
 - 3. Rs.7,692.31
 - 4. Rs.9,000.35

Question ID : 2643306125
Status : 5 Answered
Chosen Option : 3

Q.13 An article marked for ₹30,000 is available through two discount schemes. Under scheme 1, successive discounts of 25%, 16% and 15% are offered. Under scheme 2, successive discounts of 20%, 15% and 16% are offered. Find the difference between the selling price under the two schemes.

- Ans
- 1. ₹1,073
 - 2. ₹1,070
 - 3. ₹1,071
 - 4. ₹1,072

Question ID : 2643306340
Status : 1 Answered
Chosen Option : 3

Q.14 What is the average speed of a car if it travels 300 km in 4 h and remaining 50 km in 5 h?

- Ans
- 1. 55
 - 2. 45
 - 3. 50
 - 4. 65

Question ID : 2643306329
Status : 7 Answered
Chosen Option : 3

Q.15 In an election, two candidates contested. The winner secured 54% of the votes and won by 256 votes. Find the total number of votes polled if 96 votes were declared invalid?

- Ans
- 1. 3784
 - 2. 3296
 - 3. 3994
 - 4. 3568

Question ID : 26433063924
Status : Not Answered
Chosen Option : --

Q.16 A man sold an article for Rs.644 gaining $\frac{1}{3}$ th of his outlay. Find the cost price of the article.

- Ans
- 1. Rs.793
 - 2. Rs.580
 - 3. Rs.483
 - 4. Rs.453

Question ID : 2643306125
Status : 3 Answered
Chosen Option : 3

Q.17 In an election contested by two candidates, one candidate got 40% of the total votes and still lost by 800 votes, what is the total number of votes cast?

- Ans
- 1. 2500
 - 2. 4000
 - 3. 3550
 - 4. 1550

Question ID : 2643306124
Status : 7 Answered
Chosen Option : 2

Q.18 A completes a work in 3 days while B completes it in 6 days. If they work alternately with A starting work first, then in how many days will the work be finished?

- Ans
- 1. 6
 - 2. 7
 - 3. 5
 - 4. 4

Question ID : 2643306342
Status : 6 Answered
Chosen Option : 4

Q.19 Ska bought three shirts for her husband and paid Rs.4,200 for all the three pieces. The shopkeeper gave her a discount of 20% on the total amount. What was the marked price of one shirt?

- Ans
- 1. Rs.1,800
 - 2. Rs.2,150
 - 3. Rs.1,950
 - 4. Rs.1,750

Question ID : 26433063321
Status : Not Attempted and Marked For Review
Chosen Option : --

Q.20 The average of the squares of the natural numbers from 1 to 11 is _____.

- Ans
- 1. 46
 - 2.
 - 506
 - 3.
 - 508
 - 4. 48

Question ID : 2643306118
Status : 8 Answered
Chosen Option : 1

Q.21 The radii of the two spheres are in the ratio 4 : 3. What is the ratio between their volumes?

- Ans
- 1. 36 : 27
 - 2. 25 : 64
 - 3. 64 : 36
 - 4. 64 : 27

Question ID : 2643306128
Status : 3 Answered
Chosen Option : 4

Q.22 If a car covers 80 km in 5 litres of petrol, how much distance (in km) will it cover in 26 litres of petrol?

- Ans
- 1. 417
 - 2. 415
 - 3. 416
 - 4. 418

Question ID : 2643306341
Status : 4 Answered
Chosen Option : 3

Q.23 Rajesh made a profit of 14% when he sold a raincoat for ₹7,980. Find the cost price of the raincoat.

- Ans
- 1. ₹6,500
 - 2. ₹6,000
 - 3. ₹7,000
 - 4. ₹7,500

Question ID : 2643306339
Status : 2 Answered
Chosen Option : 3

Q.24 The speed of a boat in still water is 15 km/h and the speed of the current is 9 km/h. The distance travelled by the boat downstream in 25 minutes is:

- Ans
- 1. 8 km
 - 2. 10 km
 - 3. 12 km
 - 4. 9 km

Question ID : 2643306349
Status : 1 Answered
Chosen Option : 2

Q.25 Three-fourth students of a class are boys. If 120 girls are added to the class, then three-fourth students of the class would be girls. What percentage increment should be there in the girls to have 40 girls in the class?

- Ans
- 1. 100%
 - 2. 133.33%
 - 3. 166.67%
 - 4. 266.67%

Question ID : 26433071251
Status : Not Answered
Chosen Option : --

Section : General Awareness

Q.1 Ashoka sent his son Mahendra to which of the following neighbouring countries to propagate Buddhism in ancient India?

- Ans
- 1. Sri Lanka
 - 2. Nepal
 - 3. Bhutan
 - 4. Tibet

Question ID : 2643306549
Status : 9 Answered
Chosen Option : 1

Q.2 Which type of protein is found in milk?

- Ans
- 1. Pepsin and lipase
 - 2. Chymotrypsin
 - 3. Trypsin and amylase
 - 4. Casein and whey protein

Question ID : 2643305404
Status : 7 Answered
Chosen Option : 4

Q.3 In February 2022, the Public Works Department of Delhi Government has decided to dedicate a one-kilometre long stretch in North Delhi to India's Olympics and Para Olympics 2021 champions. What is the name given to this sport-themed stretch?

- Ans
- 1. Olympic Boulevard
 - 2. Olympic Town
 - 3. Olympic Park
 - 4. Olympic Street

Question ID : 26433069800
Status : Not Answered
Chosen Option : --

Q.4 'Waiting for a Visa' is an autobiography of which of the following Indian leaders?

- Ans
- 1. Rajendra Prasad
 - 2. Jawaharlal Nehru
 - 3. Bhimrao Ambedkar
 - 4. Indira Gandhi

Question ID : 26433054175
Status : Marked For Review
Chosen Option : 1

Q.5 'Alarippu' is one of the stages of which of the following Indian classical dances? Ans

- 1. Kathakali
- 2. Kuchipudi
- 3. Bharatanatyam
- 4. Mohiniyattam

Question ID : 26433054128
Status : Not Answered
Chosen Option : --

Q.6 In which of the following countries was the first winter Olympic Games organised by the IOC?

- Ans
- 1. Britain
 - 2. France
 - 3. Australia
 - 4. The US

Question ID : 26433054674
Status : Marked For Review
Chosen Option : 1

Q.7 In which of the following years did Muhammad Ghori defeat Prithviraj Chauhan in the second battle of Tarain?

- Ans
- 1. 1180
 - 2. 1199
 - 3. 1173
 - 4. 1192

Question ID : 2643306551
Status : 8 Answered
Chosen Option : 4

Q.8 Which of the following started in August 1942 and was the last nationwide movement led by Mahatma Gandhi against the British Raj in India?

- Ans
- 1. Civil Disobedience Movement
 - 2. Non-cooperation Movement
 - 3. Quit India Movement
 - 4. Champaran Movement

Question ID : 2643307141
Status : 1 Answered
Chosen Option : 3

Q.9 Which of the following Stupas is situated in the present-day Madhya Pradesh?

- Ans
- 1. Ramabhar Stupa
 - 2. Sanchi Stupa
 - 3. Kesaria Stupa
 - 4. Shanti Stupa

Question ID : 2643305415
Status : 8 Answered
Chosen Option : 2

Q.10 Which of the following options is correctly paired

- Ans
- 1. Outermost layer of earth – outer core
 - 2. Innermost layer of earth – Inner core
 - 3. Innermost layer of earth – Crust
 - 4. Innermost layer of earth – Mantle

Question ID : 2643305400
Status : 1 Answered
Chosen Option : 2

Q.11 Which of the following manufacturing industries was set up in Rourkela in 1959, which is in Sundergarh district of Odisha?

- Ans
- 1. Iron and Steel industry
 - 2. Textile industry
 - 3. Cement industry
 - 4. Chemical industry

Question ID : 2643306714
Status : 6 Answered
Chosen Option : 1

Q.12 In terms of length and size of the written Constitution among all the countries in the world, what is the rank of the Constitution of India?

- Ans
- 1. Third
 - 2. First
 - 3. Second
 - 4. Fourth

Question ID : 2643305451
Status : 2 Answered
Chosen Option : 2

Q.13 Who among the following was NOT associated with the 'Trinity of Carnatic Music'?

- Ans
- 1. Tyagaraja
 - 2. Shyama Sastri
 - 3. Annamayya
 - 4. Muthuswami Dikshitar

Question ID : 26433054383
Status : Not Answered
Chosen Option : --

Q.14 _____ is a scientific device used to measure atmospheric pressure.

Ans 1.

- Thermometer
- 2. Barometer
- 3. Hydrometer
- 4. Electrometer

Question ID : 2643307676
Status : 8 Answered
Chosen Option : 2

Q.15 Identify the national festival on the basis of the given clues:

i) India attained freedom on this day.

ii) The Prime Minister gives a speech at the Red Fort in Delhi.

Ans 1. Mahavir Jayanti

- 2. Republic Day
- 3. Guru Nanak Jayanti
- 4. Independence Day

Question ID : 2643305422
Status : 0 Answered
Chosen Option : 4

Q.16 On 7 February 2022, which state government launched an open-air classroom for students from class 1 to 7 called 'Paray Shikshalaya'?

Ans 1. Chhattisgarh

- 2. West Bengal
- 3. Kerala
- 4. Maharashtra

Question ID : 26433054424
Status : Not Answered
Chosen Option : --

Q.17 The famous musician RK Bijapore is associated with which musical instrument?

Ans 1. Pakhawaj

- 2. Sarod
- 3. Harmonium
- 4. Tabla

Question ID : 26433054391
Status : Not Answered
Chosen Option : --

Q.18 In which Indian state is Cold Desert Biosphere Reserve located?

Ans 1. Uttarakhand

- 2. Haryana
- 3. Sikkim
- 4. Himachal Pradesh

Question ID : 2643306715
Status : 1 Answered
Chosen Option : 4

Q.19 What is the valency of chloride in $AlCl_3$?

- Ans
- 1. 4
 - 2. 3
 - 3. 2
 - 4. 1

Question ID : 26433054020
Status : Not Answered
Chosen Option : --

Q.20 Bhagat Singh threw a bomb on the Central Legislative Assembly on 8 April 1929 along with who among the following revolutionaries in British India?

- Ans
- 1. Chandra Shekhar Azad
 - 2. Shivaram Rajguru
 - 3. Batukeshwar Dutt
 - 4. Ashfaq Ulla Khan

Question ID : 2643306556
Status : 1 Answered
Chosen Option : 4

Q.21 Which of the following forts is NOT situated in the Indian state of Rajasthan?

- Ans
- 1. Nahargarh
 - 2. Warangal
 - 3. Kishangarh
 - 4. Lohagarh

Question ID : 2643305416
Status : 7 Answered
Chosen Option : 2

Q.22 Intensified Mission Indradhanush 4.0, launched by Ministry of Health and Family Welfare on 7 February 2022, will have _____ rounds and will be conducted in 416 districts.

- Ans
- 1. Four
 - 2. Five
 - 3. Three
 - 4. Two

Question ID : 26433054645
Status : Not Answered
Chosen Option : --

Q.23 The Constitution of India borrowed the quasi federal structure of government from which country?

- Ans
- 1. Switzerland
 - 2. Canada
 - 3. Australia
 - 4. United States of America

Question ID : 2643305407
Status : 2 Answered
Chosen Option : 2

Q.24 R ajendra Prasanna plays which musical instrument?

- Ans
- 1. Veena
 - 2. Flute
 - 3. Tabla
 - 4. Sitar

Question ID : 26433054394
Status : Marked For Review
Chosen Option : 1

Q.25Khajuraho Dance Festival is celebrated in which of the following states of India?

- Ans
- 1. Gujarat
 - 2. Uttar Pradesh
 - 3. Madhya Pradesh
 - 4. Maharashtra

Question ID : 2643305414
Status : 0 Answered
Chosen Option : 3

Exam Date	04/08/2022
Exam Time	9:00 AM - 10:00 AM
Subject	Selection Post Phase X Matriculation Level

Section : General Intelligence

Q.1 Select the option that is related to the fifth term in the same way as the second term is related to the first term and the fourth term is related to the third term.
HARBOUR : HERBUAR :: FOREST : FURIST :: GLOBAL : ?

- Ans
- 1. GLUBAL
 - 2. GLOBEL
 - 3. GLUBIL
 - 4. GLUBEL

Question ID : 2643305593
Status : 5 Answered
Chosen Option : 4

Q.2 Two statements are given, followed by two conclusions numbered I and II. Assuming the statements to be true, even if they seem to be at variance with commonly known facts, decide which of the conclusions logically follow(s) from the statements.

Statements:

All cycles are buses.

Some buses are trains.

Conclusions:

I. No cycle is a train.

II. All cycles are train.

- Ans
- 1. Only conclusion II follows
 - 2. Only conclusion I follows
 - 3. Neither conclusion I nor II follows
 - 4. Both conclusions I and II follow

Question ID : 2643305522
Status : 2 Answered
Chosen Option : 3

Q.3 Select the option that represents the correct order of the given words as they would appear in an English dictionary.

1. Occupation

2. Ocean

3. Octave

4. Occur

5. Octopus

6. Occasion

- Ans
- 1. 6, 4, 1, 2, 3, 5
 - 2. 2, 3, 5, 6, 1, 4
 - 3. 6, 1, 4, 2, 5, 3
 - 4. 6, 1, 4, 2, 3, 5

Question ID : 2643305672
Status : 7 Answered
Chosen Option : 4

Q.4T

A three statements are given, followed by three conclusions numbered I, II and III. Assuming the statements to be true, even if they seem to be at variance with commonly known facts, decide which of the conclusions logically follow(s) from the statements.

Statements:

All desks are pens.
Some pens are clips.
No clip is a book.

Conclusions:

I. All pens are desks.
II. Some books are not clips.
III. All pens are clips.

- Ans
- 1. Only conclusion III follows
 - 2. Only conclusion II follows
 - 3. None of the conclusions follows
 - 4. Only conclusion I follows

Question ID : 2643305622
Status : 2 Answered
Chosen Option : 2

Q.5 Select the correct combination of mathematical signs to sequentially replace the * signs and to balance the given equation.

$40 * 5 * 36 * 60 * 32 * 316$

- Ans
- 1. +, x, -, =, ÷
 - 2. x, +, -, ÷, =
 - 3. +, -, x, ÷, =
 - 4. ÷, x, +, -, =

Question ID : 2643305645
Status : 0 Answered
Chosen Option : 4

Q.6 In a certain code language, 'IMAGE' is written as 'KPEJG', and 'HOTEL' is written as 'JRXHN'. How will 'JAPAN' be written in that language?

- Ans
- 1. LDTEP
 - 2. LDPDT
 - 3. LDTDP
 - 4. LDTEQ

Question ID : 2643305570
Status : 2 Answered
Chosen Option : 3

Q.7 Select the option that is related to the fifth letter-cluster in the same way as the second letter-cluster is related to the first letter-cluster and the fourth letter-cluster is related to the third letter-cluster.

GOLF : IMND :: DOLL : FMNJ :: MOLD : ?

- Ans
- 1. OMNB
 - 2. ONNB
 - 3. OMNC
 - 4. OMMA

Question ID : 2643305666
Status : 9 Answered
Chosen Option : 1

Q.8 In ode langua

'5 acge, 'praises to him' is written as '723', 'first in school' is written as '26', 'new chapter begins' is written as '376'. What is the code for the phrase 'to class reunion' in this language?

- Ans
- 1. 7527
 - 2. 7257
 - 3. 7246
 - 4. 6256

Question ID : 2643305673
Status : 5 Answered
Chosen Option : 2

Q.9 Select the option in which the given figure is embedded (Rotation is NOT allowed).



Ans

- 1.
- 2.
- 3.
- 4.

Question ID : 2643305596
Status : 2 Answered
Chosen Option : 1

Q.10 Pointing to a person in a photograph, a man, Ravi said, "He is the father of my son's mother's brother." How is the person related to Ravi?

- Ans
- 1. Father-in-law
 - 2. Father
 - 3. Brother
 - 4. Brother-in-law

Question ID : 2643305566
Status : 4 Answered
Chosen Option : 1

Q.11 Which letter-cluster will replace the question mark (?) to complete the given series? WDU, QTHP, ?, UNPF, WKTA

- Ans
- 1. TRLK
 - 2. SQLK
 - 3. SQKJ
 - 4. TRKJ

Question ID : 2643305524
Status : 7 Answered
Chosen Option : 2

Q.12 In a certain code language, 'MINUTE' is written as 'NKOWUG' and 'LESSON' is written as 'MGTUPP'. How will 'IMPORT' be written in that language?

- Ans
- 1. JOQTSV
 - 2. JOQQSV
 - 3. JORQSV
 - 4. JOQQTV

Question ID : 2643305691
Status : 6 Answered
Chosen Option : 2

Q.13 'P @ Q' means 'P is the father of Q'
'P & Q' means 'P is the mother of Q'
'P # Q' means 'P is the wife of Q'
'P × Q' means 'P is the husband of Q'
If 'A # B @ C × D & E', then how is A related to E?

- Ans
- 1. Father's father
 - 2. Son's daughter
 - 3. Father's mother
 - 4. Mother's mother

Question ID : 2643305679
Status : 4 Answered
Chosen Option : 3

Q.14 Select the option that represents the correct order of the given words as they would appear in an English dictionary.

1. Understand
2. Untie
3. Uncle
4. University
5. Unlimited
6. Unknown

- Ans
- 1. 1, 3, 4, 6, 5, 2
 - 2. 3, 1, 6, 4, 5, 2
 - 3. 1, 4, 3, 6, 5, 2
 - 4. 3, 1, 4, 6, 5, 2

Question ID : 2643305625
Status : 6 Answered
Chosen Option : 4

Q.15 Which

P letter-cluster will replace the question mark (?) to complete the given series?DRT, ?, LJPP, JMON, HPNL

Ans 1. NGQR

2. NGRQ

3. NFQQ

4. NFPS

Question ID : 2643305523
Status : 6 Answered
Chosen Option : 1

Q.16 In a code language, 'HURDLE' is written as 'REHVNU' and 'TARGET' is written as 'FYHSUF'. How will 'FLANKER' be written in that language?

Ans 1. RKEANLF

2. REKNALF

3. TNYLOUH

4. TNYOULH

Question ID : 2643305626
Status : 5 Answered
Chosen Option : 3

Q.17 In a certain code language, 'NATIVE' is written as 'IEVNTA' and 'PALACE' is written as 'AECPLA'. How will 'RELATE' be written in that language?

Ans 1. AETRLA

2. ATRELE

3. TRAELE

4. TELARE

Question ID : 2643305592
Status : 3 Answered
Chosen Option : 1

Q.18 Select the option that represents the letters that, when sequentially placed from left to right in the blanks below, will complete the letter series.

D _ G _ J _ F G _ D _ _ J _ F _ J

Ans 1. FDJFJDG

2. FGJFGDG

3. FDJFGDG

4. FDJFGDL

Question ID : 2643305506
Status : 4 Answered
Chosen Option : 3

Q.19 Th

A ree statements are given, followed by three conclusions numbered I, II and III. Assuming the statements to be true, even if they seem to be at vari commonly known facts, decide which of the conclusions logically follow(s) from the

statements.

Statements:

Some boxes are pins.

All pins are taps.

No tap is a star.

Conclusions:

I. All boxes are pins.

II. Some taps are pins.

III. Some stars are not taps.

Ans 1. All of the conclusions follow

2. Only conclusion II and III

follow 3. Only conclusion I and III

follow 4. Only conclusions I and II

follow

Question ID : 2643305622
Status : 6 Answered
Chosen Option : 2

Q.20 Which letter-cluster will replace the question mark (?) to complete the given series?

GQLC, HSOG, ?, JWUO, KYXS

Ans 1. IUSJ

2. ITSL

3. IURK

4. ITRL

Question ID : 2643305523
Status : 5 Answered
Chosen Option : 3

Q.21 Which of the following numbers will replace the question mark (?) in the given series?

9, 17, 33, 65, ?, 257

Ans 1. 229

2. 129

3. 89

4. 99

Question ID : 2643305644
Status : 2 Answered
Chosen Option : 2

Q.22 In a code language, 'let us go shopping' is written as '3228', 'make one list' is written as '434', 'the cart is filled' is written as '3426'. What is the code for the phrase 'pay by cash or card' in this language?

Ans 1. 34224

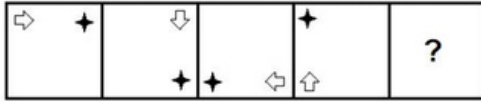
2. 32424

3. 43224

4. 42324

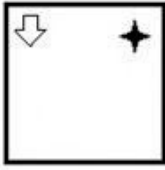
Question ID : 2643305673
Status : 7 Answered
Chosen Option : 2

Q.23 Select the figure from among the given options that can replace the question mark (?) in the following series.




Ans

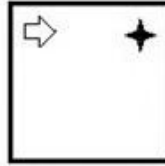
✗ 1.




✗ 2.



✓ 3.



✗ 4.



Question ID : 2643305594
 Status : 6 Answered
 Chosen Option : 3

Q.24 Select the option that is related to the fifth number in the same way as the second number is related to the first number and the fourth number is related to the third number.

32 : 4 :: 72 : 6 :: 200 : ?

Ans ✗ 1. 2

✗ 2. 8

✗ 3. 12

✓ 4. 10

Question ID : 2643306940
 Status : 3 Answered
 Chosen Option : 4

Q.25 In a code language, 'MARKED' is written as '+5%2*@', 'RUBIES' is written as '%4#3*£' and 'SNORK' is written as '£9\$%2'. How will 'BRAND' be written in that language?

Ans ✗ 1. 42+£*

✗ 2. #%5£*

✓ 3. #%59@

✗ 4. 4259@

Question ID : 2643305526
 Status : 4 Answered
 Chosen Option : 3

Q.1 Select the most appropriate ANTONYM of the given word.

Intentional

- Ans
- 1. Accidental
 - 2. Consequential
 - 3. Careless
 - 4. Eventual

Question ID : 2643306000
Status : 1 Answered
Chosen Option : 1

Q.2 Select the option that expresses the given sentence in passive voice.

They noted down the details very carefully.

- Ans
- 1. The details were noted down by them very carefully.
 - 2. The details was being noted down by them very carefully
 - 3. The details were being noted down by them very carefully
 - 4. The details had been noted down by them very carefully.

Question ID : 2643306060
Status : 4 Answered
Chosen Option : 1

Q.3 Select the most appropriate ANTONYM of the given word.

Dainty

- Ans
- 1. Baffled
 - 2. Confused
 - 3. Clumsy
 - 4. Lazy

Question ID : 2643306000
Status : 2 Answered
Chosen Option : 3

Q.4 Select the INCORRECTLY spelt word.

- Ans
- 1. Battalion
 - 2. Battery
 - 3. Consenses
 - 4. Confession

Question ID : 2643306042
Status : 0 Answered
Chosen Option : 3

Q.5 Select the correctly spelt word to fill in the blank.

Gaurav faced _____ of court.

- Ans
- 1. qriminal Contemp
 - 2. criminal contempt
 - 3. kriminal cuntempt
 - 4. kqriminal coontempt

Question ID : 2643306051
Status : 6 Answered
Chosen Option : 2

Q.65 Select the most appropriate option to fill in the blank.
It is always good to eat _____ of different colours.

- Ans
- 1. wheat
 - 2. meat
 - 3. vegetables
 - 4. rice

Question ID : 2643306079
Status : 1 Answered
Chosen Option : 3

Q.7 Select the most appropriate synonym of the given word.

Emancipate

- Ans
- 1. Fetter
 - 2. Liberate
 - 3. Enchain
 - 4. Confine

Question ID : 2643305963
Status : 5 Answered
Chosen Option : 2

Q.8 Select the most appropriate option to fill in the blank.

Our old Principal was standing and I _____ him a chair.

- Ans
- 1. gave
 - 2. offered
 - 3. took
 - 4. ordered

Question ID : 2643305968
Status : 9 Answered
Chosen Option : 2

Q.9 Select the option that can be used as a one-word substitute for the given group of words.

Delay in doing something to a later time

- Ans
- 1. Schedule
 - 2. Span
 - 3. Procrastination
 - 4. Ephemeral

Question ID : 2643306029
Status : 3 Answered
Chosen Option : 3

Q.10 Select the most appropriate meaning of the given idiom.

A bone of contention

- Ans
- 1. A push
 - 2. A settlement
 - 3. An agreement
 - 4. A dispute

Question ID : 2643306012
Status : 1 Answered
Chosen Option : 4

Q.11 Select the most appropriate meaning of the given idiom.

Stand in one's own light

- Ans
- 1. To disclose
 - 2. To act against one's own interest
 - 3. In favour with
 - 4. With all power

Question ID : 2643306022
Status : 4 Answered
Chosen Option : 2

Q.12 Select the option that can be used as a one-word substitute for the given group of words.

A large group of people

- Ans
- 1. Population
 - 2. Posse
 - 3. Congregation
 - 4. Horde

Question ID : 2643305970
Status : 2 Answered
Chosen Option : 2

Q.13 Select the most appropriate synonym of the given word.

Stupid

- Ans
- 1. Cunning
 - 2. Moody
 - 3. Clumsy
 - 4. Dull

Question ID : 2643306089
Status : 0 Answered
Chosen Option : 4

Q.14 Select the INCORRECTLY spelt word

Ans 1. Begining

2. Becoming

3. Bellowing

4. Believing

Question ID : 2643306022
Status : 8 Answered
Chosen Option : 1

Q.15 Select the option that expresses the given sentence in passive voice.

The information surprised us.

Ans 1. We have been surprised by the information.

2. We were surprised by the information.

3. We were feeling surprised at the information.

4. We are surprised by the information.

Question ID : 2643306056
Status : 5 Answered
Chosen Option : 2

Comprehension:

In the following passage, some words have been deleted. Read the passage carefully and select the most appropriate option to fill in each blank.

Horus, the falcon-headed god, is a (1) _____ ancient Egyptian god. He has become one of the most commonly used symbols of Egypt, seen on Egyptian airplanes, and on hotels and restaurants (2) _____ the land. He is the son of Osiris and Isis, the divine child of the holy family triad. He is one of many gods (3) _____ with the falcon. His name means 'he who is above' and 'he who is distant'. The falcon had been worshipped from earliest times as a (4) _____ deity whose body represents the heavens and whose eyes represent the sun and the moon. Horus is (5) _____ as a falcon wearing a crown with a cobra or the Double Crown of Egypt. The hooded cobra known as Uraeus, which the gods and pharaohs wore on their foreheads, symbolises light and royalty. It is there to protect the person from harm.

SubQuestion No : 16

Q.16 Select the most appropriate option to fill in blank number 1.

Ans 1. nonchalant

2. humble

3. rebellious

4. revered

Question ID : 2643307175
Status : 1 Answered
Chosen Option : 4

Comprehension:

In the following passage, some words have been deleted. Read the passage carefully and select the most appropriate option to fill in each blank.

Horus, the falcon-headed god, is a (1) _____ ancient Egyptian god. He has become one of the most commonly used symbols of Egypt, seen on Egyptian airplanes, and on hotels and restaurants (2) _____ the land. He is the son of Osiris and Isis, the divine child of the holy family triad. He is one of many gods (3) _____ with the falcon. His name means 'he who is above' and 'he who is distant'. The falcon had been worshipped from earliest times as a (4) _____ deity whose body represents the heavens and whose eyes represent the sun and the moon. Horus is (5) _____ as a falcon wearing a crown with a cobra or the Double Crown of Egypt. The hooded cobra known as Uraeus, which the gods and pharaohs wore on their foreheads, symbolises light and royalty. It is there to protect the person from harm.

SubQuestion No : 17

Q.17 Select the most appropriate option to fill in blank number 2.

- Ans
- 1. throughout
 - 2. away from
 - 3. alongside
 - 4. outside

Question ID : 2643307175
Status : 2 Answered
Chosen Option : 3

Comprehension:

In the following passage, some words have been deleted. Read the passage carefully and select the most appropriate option to fill in each blank.

Horus, the falcon-headed god, is a (1) _____ ancient Egyptian god. He has become one of the most commonly used symbols of Egypt, seen on Egyptian airplanes, and on hotels and restaurants (2) _____ the land. He is the son of Osiris and Isis, the divine child of the holy family triad. He is one of many gods (3) _____ with the falcon. His name means 'he who is above' and 'he who is distant'. The falcon had been worshipped from earliest times as a (4) _____ deity whose body represents the heavens and whose eyes represent the sun and the moon. Horus is (5) _____ as a falcon wearing a crown with a cobra or the Double Crown of Egypt. The hooded cobra known as Uraeus, which the gods and pharaohs wore on their foreheads, symbolises light and royalty. It is there to protect the person from harm.

SubQuestion No : 18

Q.18 Select the most appropriate option to fill in blank number 3.

- Ans
- 1. accommodated
 - 2. endowed
 - 3. possessed
 - 4. associated

Question ID : 2643307175
Status : 3 Answered
Chosen Option : 4

Comprehension:

In the following passage, some words have been deleted. Read the passage carefully and select the most appropriate option to fill in each blank.

Horus, the falcon-headed god, is a (1) _____ ancient Egyptian god. He has become one of the most commonly used symbols of Egypt, seen on Egyptian airplanes, and on hotels and restaurants (2) _____ the land. He is the son of Osiris and Isis, the divine child of the holy family triad. He is one of many gods (3) _____ with the falcon. His name means 'he who is above' and 'he who is distant'. The falcon had been worshipped from earliest times as a (4) _____ deity whose body represents the heavens and whose eyes represent the sun and the moon. Horus is (5) _____ as a falcon wearing a crown with a cobra or the Double Crown of Egypt. The hooded cobra known as Uraeus, which the gods and pharaohs wore on their foreheads, symbolises light and royalty. It is there to protect the person from harm.

SubQuestion No : 19

Q.19 Select the most appropriate option to fill in blank number 4.

- Ans
- 1. cosmic
 - 2.
 - malevolent
 - 3. modern
 - 4. primary

Question ID : 2643307175
Status : 4 Answered
Chosen Option : 4

Comprehension:

In the following passage, some words have been deleted. Read the passage carefully and select the most appropriate option to fill in each blank.

Horus, the falcon-headed god, is a (1) _____ ancient Egyptian god. He has become one of the most commonly used symbols of Egypt, seen on Egyptian airplanes, and on hotels and restaurants (2) _____ the land. He is the son of Osiris and Isis, the divine child of the holy family triad. He is one of many gods (3) _____ with the falcon. His name means 'he who is above' and 'he who is distant'. The falcon had been worshipped from earliest times as a (4) _____ deity whose body represents the heavens and whose eyes represent the sun and the moon. Horus is (5) _____ as a falcon wearing a crown with a cobra or the Double Crown of Egypt. The hooded cobra known as Uraeus, which the gods and pharaohs wore on their foreheads, symbolises light and royalty. It is there to protect the person from harm.

SubQuestion No : 20

Q.20 Select the most appropriate option to fill in blank number 5.

- Ans
- 1. transcended
 - 2. depicted
 - 3. translated
 - 4. introduced

Question ID : 2643307175
Status : 5 Answered
Chosen Option : 2

Comprehension:

Read the given passage and answer the questions that follow.

The Blue Mountains National Park in Australia gets its name from the natural blue haze. This haze is created by the vast eucalyptus forests present in this famous world heritage area. Here, tiny droplets of oil get released from the tree and mix with water vapour and sunlight. These produce a distinctive colour as the name suggests – Blue Mountains. One of the main highlights of this area is Jenolan caves, which have limestone chasms. There is a sky ride present across the valley. A breathtaking view of the mountains can be seen from these caves. These caves are the world's oldest caves. These caves are considered to be one of the world's most inspiring wonders.

SubQuestion No : 21

Q.21 Select the most appropriate ANTONYM of the given word.

Inspiring

- Ans
- 1. Alert
 - 2. Enriching
 - 3. Interesting
 - 4. Monotonous

Question ID : 2643307284
Status : 2 Answered
Chosen Option : 4

Comprehension:

Read the given passage and answer the questions that follow.

The Blue Mountains National Park in Australia gets its name from the natural blue haze. This haze is created by the vast eucalyptus forests present in this famous world heritage area. Here, tiny droplets of oil get released from the tree and mix with water vapour and sunlight. These produce a distinctive colour as the name suggests – Blue Mountains. One of the main highlights of this area is Jenolan caves, which have limestone chasms. There is a sky ride present across the valley. A breathtaking view of the mountains can be seen from these caves. These caves are the world's oldest caves. These caves are considered to be one of the world's most inspiring wonders.

SubQuestion No : 22

Q.22 Select the most appropriate ANTONYM of the given word.

Distinctive

- Ans
- 1. Constant
 - 2. Parallel
 - 3. Different
 - 4. Alike

Question ID : 2643307284
Status : 4 Answered
Chosen Option : 4

Comprehension:

Read the given passage and answer the questions that follow.

The Blue Mountains National Park in Australia gets its name from the natural blue haze. This haze is created by the vast eucalyptus forests present in this famous world heritage area. Here, tiny droplets of oil get released from the tree and mix with water vapour and sunlight. These produce a distinctive colour as the name suggests – Blue Mountains. One of the main highlights of this area is Jenolan caves, which have limestone chasms. There is a sky ride present across the valley. A breathtaking view of the mountains can be seen from these caves. These caves are the world's oldest caves. These caves are considered to be one of the world's most inspiring wonders.

SubQuestion No : 23

Q.23 Choose the most appropriate title for the passage.

- Ans
- 1. The Blue Mountains
 - 2. Nature Wonder
 - 3. World Heritage
 - 4. Jenolan Caves

Question ID : 2643307284
Status : 1 Answered
Chosen Option : 1

Comprehension:

Read the given passage and answer the questions that follow.

The Blue Mountains National Park in Australia gets its name from the natural blue haze. This haze is created by the vast eucalyptus forests present in this famous world heritage area. Here, tiny droplets of oil get released from the tree and mix with water vapour and sunlight. These produce a distinctive colour as the name suggests – Blue Mountains. One of the main highlights of this area is Jenolan caves, which have limestone chasms. There is a sky ride present across the valley. A breathtaking view of the mountains can be seen from these caves. These caves are the world's oldest caves. These caves are considered to be one of the world's most inspiring wonders.

SubQuestion No : 24

Q.24 Based on your reading of the passage, choose the most appropriate option that describes the word 'heritage'.

- Ans
- 1. Human social background
 - 2. Someone's birth right
 - 3. Descended from the generations
 - 4. Old buildings and monuments

Question ID : 2643307284
Status : 5 Answered
Chosen Option : 4

Comprehension:

Read the given passage and answer the questions that follow.

The Blue Mountains National Park in Australia gets its name from the natural blue haze. This haze is created by the vast eucalyptus forests present in this famous world heritage area. Here, tiny droplets of oil get released from the tree and mix with water vapour and sunlight. These produce a distinctive colour as the name suggests – Blue Mountains. One of the main highlights of this area is Jenolan caves, which have limestone chasms. There is a sky ride present across the valley. A breathtaking view of the mountains can be seen from these caves. These caves are the world's oldest caves. These caves are considered to be one of the world's most inspiring wonders.

SubQuestion No : 25

Q.25 According to the passage, which element is released from the eucalyptus trees?

- Ans
- 1. Limestone
 - 2. Oil
 - 3. Vapour
 - 4. Sunlight

Question ID : 2643307284
Status : 3 Answered
Chosen Option : 2

Section : Quantitative Aptitude

Q.1100 oranges were purchased for Rs.800 and sold at the rate of Rs.108 per dozen. What is the percentage profit?

- Ans
- 1. $14\frac{1}{2}\%$
 - 2. $12\frac{1}{2}\%$
 - 3. $15\frac{1}{2}\%$
 - 4. $11\frac{1}{2}\%$

Question ID : 2643306490
Status : 3 Answered
Chosen Option : 2

Q.2 The effective annual rate of interest corresponding to a nominal rate of 10% per annum payable half-yearly is:

- Ans
- 1. 11.25%
 - 2. 10.25%
 - 3. 10.50%
 - 4. 12.50%

Question ID : 2643306126
Status : 8 Answered
Chosen Option : 2

Q.3R

h am spends 30% of his monthly salary on food, and one-fifth of the remaining onouse rent. If Ram saves Rs.7,000 per month, which is equal to on balance after spending on food and house rent, then what is his monthly salary?

- Ans
- 1. Rs.37,300
 - 2. Rs.37,600
 - 3. Rs.37,400
 - 4. Rs.37,500

Question ID : 2643306496
Status : 6 Answered
Chosen Option : 4

Q.4What is the area of a triangle with a base of 18 cm and height of 21 cm?

- Ans
- 1. 378 cm²
 - 2. 189 cm²
 - 3. 195 cm²
 - 4. 328 cm²

Question ID : 2643305824
Status : 6 Answered
Chosen Option : 2

Q.5The fourth proportional of 10, 15 and 30 is:

- Ans
- 1. 35
 - 2. 45
 - 3. 40
 - 4. 55

Question ID : 2643306348
Status : 7 Answered
Chosen Option : 2

Q.6A sum of Rs.7,600 amounts to Rs.7,980 in 2 years at simple interest. If the interest rate is increased by 5%, how much would it amount to?

- Ans
- 1. Rs.8,740
 - 2. Rs.8,470
 - 3. Rs.8,240
 - 4. Rs.8,540

Question ID : 2643306371
Status : 8 Answered
Chosen Option : 1

Q.7Out of his income, Ram spends 20% on house rent and 60% of the rest on household expenditure. If he saves Rs.4,600 per month, then his total income per month in Rs. is:

- Ans
- 1. 14375
 - 2. 13375
 - 3. 14300
 - 4. 10375

Question ID : 2643306346
Status : 0 Answered
Chosen Option : 1

Q.8 T e ver

average salary of all the staff in an office of a corporate house is Rs.6,000. The average salary of the officers is Rs.15,000 and that of the rest is Rs.5,000. If the number of staff is 300, then the number of officers is:

- Ans
- 1. 30
 - 2. 50
 - 3. 270
 - 4. 40

Question ID : 2643306400
Status : 8 Answered
Chosen Option : 1

Q.9 If a person travels three equal distances at speeds of 20 km/h, 30 km/h and 10 km/h, then find the average speed of the whole journey.

- Ans
- 1. 18.6 km/h
 - 2. 22 km/h
 - 3. 20 km/h
 - 4. 16.36 km/h

Question ID : 2643306505
Status : 4 Answered
Chosen Option : 4

Q.10 Neha is manufacturing plastic lunch boxes for a job. She got a project to manufacture some boxes, out of which she completed $\frac{15}{23}$ of the project in 30 days. In how many days did she complete the entire project for the company?

- Ans
- 1. 46
 - 2. 42
 - 3. 32
 - 4. 16

Question ID : 2643305823
Status : 0 Answered
Chosen Option : 1

Q.11 A sum of Rs.28,000 is invested by Vijay at 10% p.a. compound interest for the period of 4 years. How much money (in Rs.) will Vijay receive after 4 years?

- Ans
- 1. Rs.41,994.80
 - 2. Rs.40,992.80
 - 3. Rs.12,994.80
 - 4. Rs.40,994.80

Question ID : 2643306334
Status : 0 Answered
Chosen Option : 4

Q.12 A girl walks to the park, situated 450m from her house, in 4 min and comes back in 6 min. What is the average speed of the girl (in km/h)?

- Ans
- 1. 5.4 km/h
 - 2. 5.2 km/h
 - 3. 4.4 km/h
 - 4. 5 km/h

Question ID : 2643306401
Status : 2 Answered
Chosen Option : 2

Q.13 Ramlls almond

H ses at the cost price but uses false weight and thus gains 25% profit.ow many grams of almonds does he give in 3.5 kilograms?

- Ans
- 1. 2500
 - 2. 2700
 - 3. 2600
 - 4. 2800

Question ID : 2643305866
Status : 9 Answered
Chosen Option : 4

Q.14 8 men working 9 hours a day complete a piece of work in 20 days. In how many days can 7 men working for 10 hours a day complete the same piece of work?

- Ans
- 1. $18\frac{4}{7}$
 - 2. $18\frac{3}{7}$
 - 3. $20\frac{3}{7}$
 - 4. $20\frac{4}{7}$

Question ID : 2643306396
Status : 6 Answered
Chosen Option : 4

Q.15 Pardeep can complete a piece of work in 16 days. He worked for 4 days and left the work, thereafter Sohan finished the remaining work in 8 days. In how many days, can Pardeep and Sohan together complete the work?

- Ans
- 1. $4\frac{2}{5}$
 - 2. $6\frac{2}{5}$
 - 3. $5\frac{2}{5}$
 - 4. $7\frac{2}{5}$

Question ID : 2643306342
Status : 5 Answered
Chosen Option : 2

Q.16 The ratio of the prices of tea to coffee is 3 : 5 and the ratio of their quantities consumed by a family is 5 : 7. Find the ratio of expenditure on tea to coffee.

- Ans
- 1. 5 : 3
 - 2. 3 : 9
 - 3. 3 : 7
 - 4. 7 : 3

Question ID : 2643306340
Status : 9 Answered
Chosen Option : 3

Q.17 P

O raven is offering a 10% discount on all clothes to sell the stock as early as possible. ne of his friends, Vijay, came to the shop and purchased one friendship, Praveen gave an additional 6% discount to Vijay. What was the price of the coat if Vijay paid Rs.7,614?

- Ans
- 1. Rs.9,000
 - 2. Rs.9,500
 - 3. Rs.8,500
 - 4. Rs.9,800

Question ID : 2643306332
Status : 2 Answered
Chosen Option : 1

Q.18The ratio of the lengths of two trains is 7 : 5 and the ratio of their speeds is 9 : 7. Find the ratio of the time taken by them to cross a pole.

- Ans
- 1. 49 : 45
 - 2. 35 : 46
 - 3. 49 : 35
 - 4. 46 : 49

Question ID : 2643306499
Status : 8 Answered
Chosen Option : 1

Q.19A boat covers 18 km downstream in 3 hours and the same distance upstream in 6 hours. The speed of the boat in still water is _____.

- Ans
- 1. 5 km/h
 - 2. 5.5 km/h
 - 3. 4 km/h
 - 4. 4.5 km/h

Question ID : 2643306395
Status : 6 Answered
Chosen Option : 4

Q.20Find the greatest number that exactly divides 8, 12, 20 and 24.

- Ans
- 1. 4
 - 2. 6
 - 3. 12
 - 4. 8

Question ID : 2643306343
Status : 2 Answered
Chosen Option : 1

Q.21A dealer marks a dishwasher 40% above the cost price and allows a discount of 11% on it. What is his profit (rounded off to 1 decimal place) percentage?

- Ans
- 1. 42.2%
 - 2. 31.7%
 - 3. 28.6%
 - 4. 24.6%

Question ID : 2643306321
Status : 0 Answered
Chosen Option : 4

Q.22 The sum of the first nine prime numbers is:

Ans 1. 100

2. 77

3. 129

4. 123

Question ID : 2643306367
Status : 8 Answered
Chosen Option : 1

Q.23A metallic solid hemisphere of radius 12 cm is melted and recast into spheres of radius 2 cm. Find the number of spheres thus formed.

Ans 1. 184

2. 142

3. 216

4. 108

Question ID : 2643306326
Status : 4 Answered
Chosen Option : 4

Q.24Anandi sold a mobile for Rs.22,140 at a profit of 23%. What was the cost price of the mobile?

Ans 1. Rs.20,000

2. Rs.18,000

3. Rs.18,500

4. Rs.18,550

Question ID : 2643306331
Status : 3 Answered
Chosen Option : 2

Q.25There are two symbols available for voters to cast their votes – Car and Umbrella. The 'Umbrella' got 2412 votes, which were 120% of the votes of the 'Car'. How many votes were cast in total?

Ans 1. 4400

2. 4500

3. 4200

4. 4422

Question ID : 2643305820
Status : 6 Answered
Chosen Option : 4

Section : General Awareness

Q.1 In

November 2021, M. Appavu, the state legislative assembly speaker of which state assembly called for 'setting a binding timeframe within which bills should be passed, returned or reserved for consideration of the President of India by the Governors'?

- Ans
- 1. Karnataka
 - 2. Kerala
 - 3. Tamil Nadu
 - 4. Andhra Pradesh

Question ID : 26433069798
Status : Not Answered
Chosen Option : --

Q.2 'Game Changer' is the name of an autobiography of which sportsperson?

- Ans
- 1. Rahul Dravid
 - 2. Yuvraj Singh
 - 3. Shane Warne
 - 4. Shahid Afridi

Question ID : 2643305437
Status : 0 Answered
Chosen Option : 4

Q.3 Who among the following led the Salt Satyagraha march from Trichy to Vedaranyam in Tamil Nadu?

- Ans
- 1. Sundara Sastri Satyamurti
 - 2. Chakravarti Rajagopalachari
 - 3. Kumaraswami Kamaraj
 - 4. Subramaniya Siva

Question ID : 26433071409
Status : Not Answered
Chosen Option : --

Q.4 Select the correct pair of state and its corresponding classical dance form from the following.

- Ans
- 1. Kuchipudi: Andhra Pradesh
 - 2. Kathakali: Tamil Nadu
 - 3. Bharatanatyam: Kerala
 - 4. Manipuri: Odisha

Question ID : 2643305430
Status : 4 Answered
Chosen Option : 1

Q.5 Sound waves and seismic P waves are examples of which type of waves?

- Ans
- 1. Matter waves
 - 2. Electromagnetic waves
 - 3. Longitudinal waves
 - 4. Transverse waves

Question ID : 2643305412
Status : 6 Answered
Chosen Option : 3

Q.6W hich of the following is India's oldest city?

- Ans
- 1. Aligarh
 - 2. Delhi
 - 3. Varanasi
 - 4. Lucknow

Question ID : 2643307676
Status : 1 Answered
Chosen Option : 3

Q.7Which of the following festivals is NOT celebrated primarily in Arunachal Pradesh?

- Ans
- 1. Sangken
 - 2. Losoong
 - 3. Tamladu
 - 4. Ojijale

Question ID : 2643305430
Status : 7 Answered
Chosen Option : 3

Q.8Who among the following musicians plays the tabla?

- Ans
- 1. Zakir Husain
 - 2. Ramnad Raghavan
 - 3. Ali Akbar Khan
 - 4. Pt. Ravi Shankar

Question ID : 2643305438
Status : 9 Answered
Chosen Option : 1

Q.9Which of the following was the first state to be annexed into the British empire under the Doctrine of Lapse introduced by Lord Dalhousie?

- Ans
- 1. Jhansi
 - 2. Nagpur
 - 3. Satara
 - 4. Sambalpur

Question ID : 2643306554
Status : 7 Answered
Chosen Option : 3

Q.10In February 2022, the Union Minister for Health and Family Welfare launched the National Polio Immunisation Drive for 2022 for administering polio drops to children below _____ years of age.

- Ans
- 1. seven
 - 2. eight
 - 3. nine
 - 4. five

Question ID : 2643305441
Status : 9 Answered
Chosen Option : 4

Q.11 In Census of India 2011, what is the criteria regarding the density of population for considering a settlement as a Census town?

- Ans
- 1. 500 persons per sq. km.
 - 2. 100 persons per sq. km.
 - 3. 300 persons per sq. km.
 - 4. 400 persons per sq. km.

Question ID : 26433067152
Status : Not Answered
Chosen Option : --

Q.12 Which of the following states registered the highest growth rate in population during 2001 - 2011?

- Ans
- 1. Kerala
 - 2. Maharashtra
 - 3. Meghalaya
 - 4. Rajasthan

Question ID : 2643306539
Status : 5 Answered
Chosen Option : 2

Q.13 The first modern Olympic Games under IOC was held in _____.

- Ans
- 1. 1890
 - 2. 1894
 - 3. 1896
 - 4. 1891

Question ID : 2643305465
Status : 1 Answered
Chosen Option : 2

Q.14 Soft drinks consist of which of the following gases?

- Ans
- 1. Carbon dioxide
 - 2. Nitrogen
 - 3. Sulphur dioxide
 - 4. Carbon monoxide

Question ID : 2643306649
Status : 7 Answered
Chosen Option : 1

Q.15 Who among the following defeated the Lodhi sultan in the battle of Panipat in 1526 and founded the Mughal empire in medieval India?

- Ans
- 1. Muhammad Azam Shah
 - 2. Akbar
 - 3. Jahandar Shah
 - 4. Babur

Question ID : 2643306553
Status : 2 Answered
Chosen Option : 4

Q.16 Arya

o bhata, a famous mathematician and astronomer of ancient India, was in the court of who among the following Gupta rulers?

- Ans
- 1. Ramagupta
 - 2. Chandragupta II
 - 3. Kumaragupta
 - 4. Samudragupta

Question ID : 2643306550
Status : 7 Answered
Chosen Option : 2

Q.17 The Kesariya Stupa is located in which Indian state?

- Ans
- 1. Assam
 - 2. Bihar
 - 3. Uttar Pradesh
 - 4. Nagaland

Question ID : 26433054351
Status : Not Answered
Chosen Option : --

Q.18 Wangala is a most famous festival of the Garo tribe of _____.

- Ans
- 1. Tamil Nadu
 - 2. Meghalaya
 - 3. Karnataka
 - 4. Uttarakhand

Question ID : 2643305414
Status : 2 Answered
Chosen Option : 2

Q.19 Which Fundamental Right was added through the 86th Constitutional Amendment, 2002?

- Ans
- 1. To safeguard public property and to abjure violence
 - 2. To value and preserve the rich heritage of our composite culture
 - 3. The parent or guardian to provide opportunities for education of his/her child/ward between the age of six and fourteen years.
 - 4. To uphold and protect the sovereignty, unity and integrity of India

Question ID : 2643305406
Status : 7 Answered
Chosen Option : 3

Q.20 Announced in February 2022, which of the following organisations is one of the partners of the Sustainable Access to Markets and Resources for Innovative Delivery of Healthcare (SAMRIDH) initiative?

- Ans
- 1. Department of Pharmaceuticals
 - 2. NITI Aayog
 - 3. Ministry of Health and Family Welfare
 - 4. Central Drugs Standard Control Organisation

Question ID : 26433069799
Status : Not Answered
Chosen Option : --

Q.21 Quartz consists of _____.

- Ans
- 1. silicon
 - 2. carbon
 - 3. iron
 - 4. nickel

Question ID : 2643306651
Status : 2 Answered
Chosen Option : 1

Q.22 Jhika Dasain, a famous tribal dance of India, is predominantly performed by which of the following tribal groups?

- Ans
- 1. Gaddi
 - 2. Santhal
 - 3. Bhil
 - 4. Kuki

Question ID : 26433054131
Status : Not Answered
Chosen Option : --

Q.23 The parasitic mode of nutrition is used by:

- Ans
- 1. mushrooms
 - 2. tape-worms
 - 3. bread moulds
 - 4. yeast

Question ID : 2643307677
Status : 7 Answered
Chosen Option : 2

Q.24 Which of the following trophies is related to cricket?

- Ans
- 1. Sultan Azlan Shah Cup
 - 2. Santosh Trophy
 - 3. Vijay Hazare Trophy
 - 4. Davis Cup

Question ID : 2643305464
Status : 9 Answered
Chosen Option : 3

Q.25 In how many classes are roads classified in India?

- Ans
- 1. Four
 - 2. Eight
 - 3. Seven
 - 4. Six

Question ID : 2643306538
Status : 7 Answered
Chosen Option : 1