

Sub Inspector in Delhi Police and Central Armed Police Forces Examination 2023
Paper I

Roll Number	
Candidate Name	
Venue Name	
Exam Date	03/10/2023
Exam Time	12:30 PM - 2:30 PM
Subject	SICPO Paper I 2023

Section : General Intelligence and Reasoning

Q.1 Which of the following numbers will replace the question mark (?) in the given series?
91, 111, 133, ?, 183, 211

Ans ☒ 1. 149
☒ 2. 156
☒ 3. 167
☒ 4. 157

Question ID : 26433067631
Option 1 ID : 264330265039
Option 2 ID : 264330265037
Option 3 ID : 264330265036
Option 4 ID : 264330265038
Status : Answered
Chosen Option : 4

Q.2 Three Statements are given followed by Three conclusions numbered I, II and III.
Assuming the statements to be true, even if they seem to be at variance with commonly known facts, decide which of the conclusions logically follow(s) from the statements.

Statements:
All valleys are mountains.
No sea is a mountain.
Some plains are seas.

Conclusions:
I. Some valleys are plains.
II. No plain is a mountain.
III. No sea is a valley.

Ans ☒ 1. Only conclusion II follows.
☒ 2. Only conclusion III follows.
☒ 3. Only conclusion I follows.
☒ 4. Both conclusions I and II follow.

Question ID : 264330145341
Option 1 ID : 264330569621
Option 2 ID : 264330569620
Option 3 ID : 264330569622
Option 4 ID : 264330569619
Status : Answered
Chosen Option : 2

Q.3 Select the set in which the numbers are related in the same way as are the numbers of the following set.

(NOTE : Operations should be performed on the whole numbers, without breaking down the numbers into its constituent digits. E.g. 13 – Operations on 13 such as adding /subtracting /multiplying etc. to 13 can be performed. Breaking down 13 into 1 and 3 and then performing mathematical operations on 1 and 3 is NOT allowed)

(25, 3, 150)
(13, 7, 182)

- Ans ☒ 1. (5,8,184)
☒ 2. (6,13,234)
☒ 3. (10,5,100)
☒ 4. (3,4,45)

Question ID : 264330145327

Option 1 ID : 264330569564

Option 2 ID : 264330569566

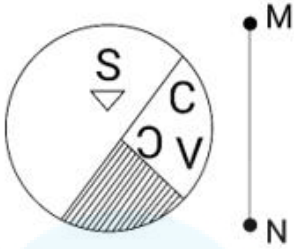
Option 3 ID : 264330569565

Option 4 ID : 264330569563

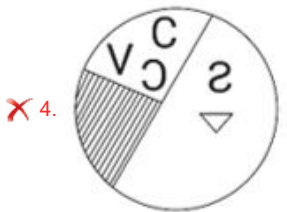
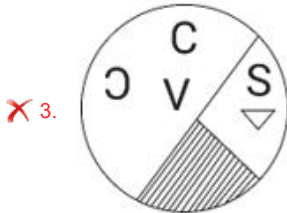
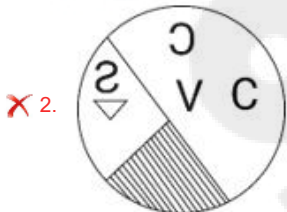
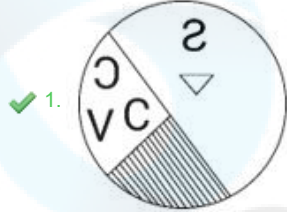
Status : Answered

Chosen Option : 3

Q.4 Select the correct mirror image of the given figure, when the mirror is placed at line MN as shown.



Ans



Question ID : 264330170163

Option 1 ID : 264330667329

Option 2 ID : 264330667328

Option 3 ID : 264330667327

Option 4 ID : 264330667330

Status : Answered

Chosen Option : 1

Q.5 In a certain code language, 'COUNTY' is written as 'ULCYGN' and 'FOREST' is written as 'RLFTHE'. How will 'MARGIN' be written in that language?

- Ans
- ☒ 1. RJMDSZ
 - ☒ 2. ZMTPRH
 - ☒ 3. ZMMRGI
 - ☒ 4. RZMNRG

Question ID : 26433074765
Option 1 ID : 264330293149
Option 2 ID : 264330293150
Option 3 ID : 264330293151
Option 4 ID : 264330293148
Status : Not Attempted and Marked For Review
Chosen Option : --

Q.6 Six students Meera, Jigyasa, Tarun, Naina, Shambhavi and Avni are sitting around a circular table facing the centre (not necessarily in the same order). Shambhavi is an immediate neighbour of both Jigyasa and Avni. Tarun is sitting third to the left of Jigyasa. Meera is sitting second to the right of Avni. Who is sitting third to the right of Meera?

- Ans
- ☒ 1. Avni
 - ☒ 2. Naina
 - ☒ 3. Jigyasa
 - ☒ 4. Shambhavi

Question ID : 26433082280
Option 1 ID : 264330322953
Option 2 ID : 264330322956
Option 3 ID : 264330322955
Option 4 ID : 264330322954
Status : Not Attempted and Marked For Review
Chosen Option : --

Q.7 Shilpa goes to a park every day for walking. One morning, she started walking from her home and walked 40 km towards the north. Then she turned to the right and walked 60 km. Again, she turned right and walked 40 km. Lastly, she took a left turn and walked 30 km. How far is she from her home?

- Ans
- ☒ 1. 140 km
 - ☒ 2. 90 km
 - ☒ 3. 100 km
 - ☒ 4. 60 km

Question ID : 26433097222
Option 1 ID : 264330381588
Option 2 ID : 264330381587
Option 3 ID : 264330381585
Option 4 ID : 264330381586
Status : Answered
Chosen Option : 2

Q.8 Which two mathematical signs should be interchanged to make the given equation correct?

$(75 + 15) \times 27 \times 1 - 9 \div 7 \times (135 + 3) - 10 \div (189 + 63) = 434$

- Ans
- ✓ 1. + and ÷
 - ✗ 2. + and -
 - ✗ 3. × and +
 - ✗ 4. ÷ and -

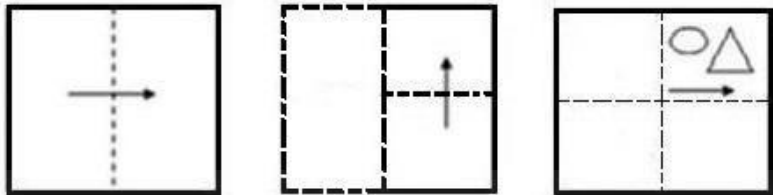
Question ID : 264330145311
Option 1 ID : 264330569501
Option 2 ID : 264330569500
Option 3 ID : 264330569499
Option 4 ID : 264330569502
Status : Not Attempted and Marked For Review
Chosen Option : --

Q.9 Select the Venn diagram that best illustrates the relationship between the following classes.
Animals, Cats, Dogs

- Ans
- ✗ 1.
 - ✗ 2.
 - ✓ 3.
 - ✗ 4.

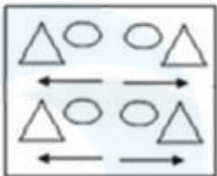
Question ID : 264330132028
Option 1 ID : 264330517210
Option 2 ID : 264330517208
Option 3 ID : 264330517209
Option 4 ID : 264330517207
Status : Answered
Chosen Option : 4

Q.10 A paper is folded and cut as shown below. How will it appear when unfolded?

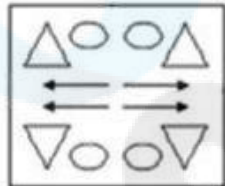


Ans

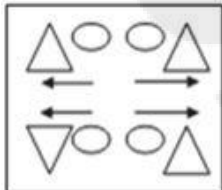
✗ 1.



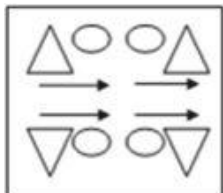
✓ 2.



✗ 3.



✗ 4.



Question ID : 26433091687

Option 1 ID : 264330360114

Option 2 ID : 264330360113

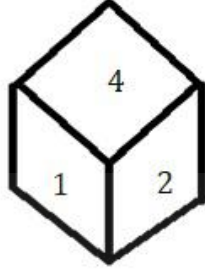
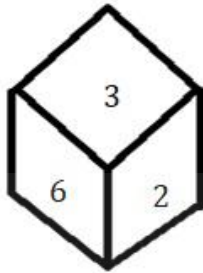
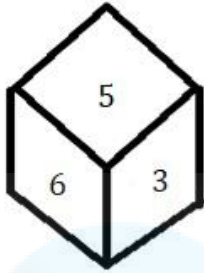
Option 3 ID : 264330360116

Option 4 ID : 264330360115

Status : Answered

Chosen Option : 2

Q.11 Three different positions of the same dice are shown. Find the number on the face opposite the face showing '5'.



- Ans
- ☒ 1. 2
 - ☐ 2. 3
 - ☐ 3. 4
 - ☐ 4. 1

Question ID : 264330108970
Option 1 ID : 264330428158
Option 2 ID : 264330428159
Option 3 ID : 264330428160
Option 4 ID : 264330428157
Status : Answered
Chosen Option : 1

Q.12 In a certain code language, 'DOING' is written as 'BQTOV' and 'ZEBRA' is written as 'FAAKB'. How will 'STORM' be written in that language?

- Ans
- ☐ 1. PETBK
 - ☐ 2. MKYTS
 - ☐ 3. PRYSK
 - ☒ 4. MLNKP

Question ID : 26433074759
Option 1 ID : 264330293127
Option 2 ID : 264330293125
Option 3 ID : 264330293124
Option 4 ID : 264330293126
Status : Not Attempted and Marked For Review
Chosen Option : --

Q.13 Two statements are given followed by two conclusions numbered I and II. Assuming the statements to be true, even if they seem to be at variance with commonly known facts, decide which of the conclusions logically follow(s) from the statements.

Statements:
Some shells are pebbles.
All pebbles are rocks.
Conclusions:
I. No shell is a rock.
II. Some shells are rocks.

- Ans
- ☐ 1. Only conclusion I follows
 - ☐ 2. Neither conclusion I nor II follows
 - ☐ 3. Both conclusions I and II follow
 - ☒ 4. Only conclusion II follows

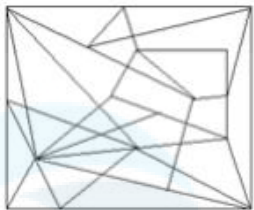
Question ID : 26433058040
Option 1 ID : 264330227144
Option 2 ID : 264330227147
Option 3 ID : 264330227146
Option 4 ID : 264330227145
Status : Answered
Chosen Option : 4

Q.14 Select the option figure in which the given figure is embedded (rotation is NOT allowed).

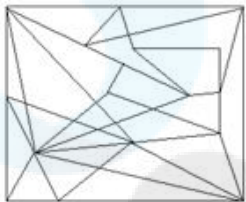


Ans

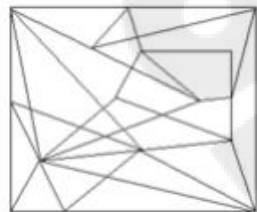
✗ 1.



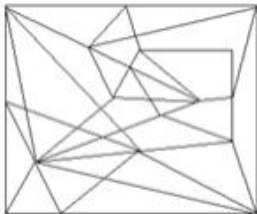
✗ 2.



✓ 3.



✗ 4.



Question ID : 264330145475

Option 1 ID : 264330570156

Option 2 ID : 264330570155

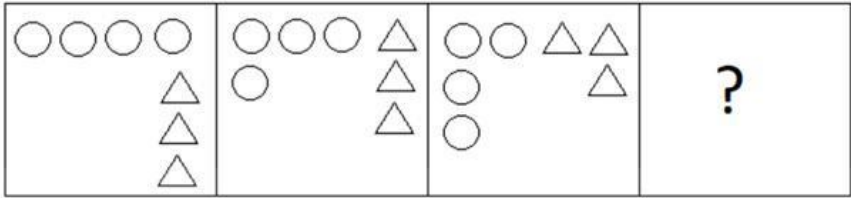
Option 3 ID : 264330570157

Option 4 ID : 264330570158

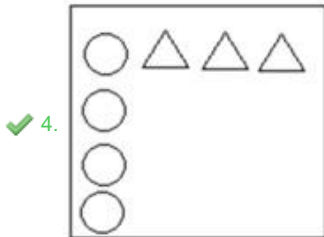
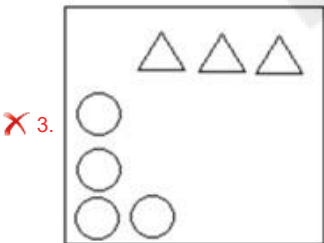
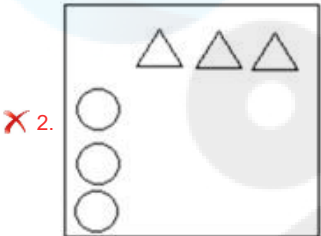
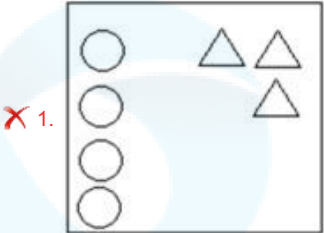
Status : Not Attempted and
Marked For Review

Chosen Option : --

Q.15 Select the figure that will come next in the following figure series.



Ans



Question ID : 26433087072

Option 1 ID : 264330341931

Option 2 ID : 264330341930

Option 3 ID : 264330341929

Option 4 ID : 264330341932

Status : Answered

Chosen Option : 4

Q.16 Select the correct option that indicates the arrangement of the given words in the order in which they appear in an English dictionary.

1. Formal
2. Foreign
3. Forest
4. Forgotten
5. Forge
6. Forlorn

Ans ☒ 1. 2, 3, 5, 4, 6, 1

☒ 2. 2, 3, 6, 1, 5, 4

☒ 3. 2, 3, 4, 5, 6, 1

☒ 4. 2, 3, 5, 6, 4, 1

Question ID : 264330145376

Option 1 ID : 264330569760

Option 2 ID : 264330569762

Option 3 ID : 264330569759

Option 4 ID : 264330569761

Status : Answered

Chosen Option : 3

Q.17 If A denotes '+', B denotes '×', C denotes '−', and D denotes '÷', then what will be the value of the following equation?
13 B 7 A 64 D 4 C 23 = ?

Ans ☒ 1. 82

☒ 2. 84

☒ 3. 86

☒ 4. 76

Question ID : 264330129784

Option 1 ID : 264330508367

Option 2 ID : 264330508369

Option 3 ID : 264330508368

Option 4 ID : 264330508370

Status : Answered

Chosen Option : 2

Q.18 Select the option that represents the letters which, when sequentially placed from left to right in the blanks below, will complete the letter series.
A _ _ D F _ K _ _ F A _ L _ _

Ans ☒ 1. DLKLFALD

☒ 2. LALKDFDK

☒ 3. KLALDKDF

☒ 4. FDLAKFDL

Question ID : 26433086951

Option 1 ID : 264330341445

Option 2 ID : 264330341447

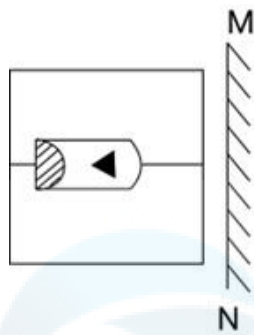
Option 3 ID : 264330341446

Option 4 ID : 264330341448

Status : Answered

Chosen Option : 3

Q.19 Select the correct mirror image of the given combination when the mirror is placed at 'MN' as shown below.



Ans

- ✓ 1.
- ✗ 2.
- ✗ 3.
- ✗ 4.

Question ID : 264330130773

Option 1 ID : 264330512204

Option 2 ID : 264330512205

Option 3 ID : 264330512203

Option 4 ID : 264330512206

Status : Answered

Chosen Option : 1

Q.20 Town Q is to the north of Town P. Town R is to the west of Town Q. Town S is to the north of Town R. Town T is to the east of Town S. What is the position of Town T with respect to Town R? (All positions are arranged in GRID pattern).

- Ans
- ✗ 1. East
 - ✗ 2. South
 - ✓ 3. North-east
 - ✗ 4. South-east

Question ID : 26433091638

Option 1 ID : 264330359919

Option 2 ID : 264330359918

Option 3 ID : 264330359917

Option 4 ID : 264330359920

Status : Answered

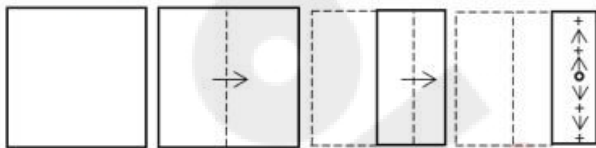
Chosen Option : 4

Q.21 In a certain code language, 'FRIGHT' is written as 'FOCQED' and 'SHREDS' is written as 'OEPPAB'. How will 'UPSETS' be written in that language?

- Ans
- ☒ 1. PMRSQB
 - ☒ 2. PMROQB
 - ☒ 3. PMRPQB
 - ☒ 4. PMSPQB

Question ID : 264330180764
Option 1 ID : 264330709026
Option 2 ID : 264330709023
Option 3 ID : 264330709025
Option 4 ID : 264330709024
Status : Answered
Chosen Option : 4

Q.22 A paper is folded and cut as shown. How will it appear when unfolded?



Ans

- ☒ 1.
- ☒ 2.
- ☒ 3.
- ☒ 4.

Question ID : 26433068428
Option 1 ID : 264330268224
Option 2 ID : 264330268227
Option 3 ID : 264330268225
Option 4 ID : 264330268226
Status : Not Attempted and Marked For Review
Chosen Option : --

Q.23 Select the set in which the numbers are related in the same way as are the numbers of the following sets.

(NOTE : Operations should be performed on the whole numbers, without breaking down the numbers into its constituent digits. E.g. 13 – Operations on 13 such as adding /subtracting /multiplying etc. to 13 can be performed. Breaking down 13 into 1 and 3 and then performing mathematical operations on 1 and 3 is NOT allowed)

(11, 33, 17), (18, 44, 21)

- Ans ☒ 1. (7, 32, 9)
☒ 2. (12, 40, 18)
☒ 3. (16, 43, 22)
☒ 4. (15, 34, 19)

Question ID : 264330145304
Option 1 ID : 264330569473
Option 2 ID : 264330569474
Option 3 ID : 264330569471
Option 4 ID : 264330569472
Status : Answered
Chosen Option : 3

Q.24 Which of the following numbers will replace the question mark (?) in the given series?

90, 110, 132, ?, 182

- Ans ☒ 1. 156
☒ 2. 169
☒ 3. 148
☒ 4. 146

Question ID : 264330145335
Option 1 ID : 264330569598
Option 2 ID : 264330569597
Option 3 ID : 264330569595
Option 4 ID : 264330569596
Status : Answered
Chosen Option : 1

Q.25 Select the set in which the numbers are related in the same way as are the numbers of the following sets.

(NOTE : Operations should be performed on the whole numbers, without breaking down the numbers into its constituent digits. E.g. 13 – Operations on 13 such as adding /subtracting /multiplying etc. to 13 can be performed. Breaking down 13 into 1 and 3 and then performing mathematical operations on 1 and 3 is NOT allowed)

(13, 104, 16), (9, 63, 14)

- Ans ☒ 1. (23, 204, 26)
☒ 2. (8, 60, 15)
☒ 3. (12, 85, 15)
☒ 4. (10, 92, 17)

Question ID : 264330145299
Option 1 ID : 264330569451
Option 2 ID : 264330569453
Option 3 ID : 264330569454
Option 4 ID : 264330569452
Status : Not Attempted and Marked For Review
Chosen Option : --

Q.26 Which of the following numbers will replace the question mark (?) in the given series?
18, 27, 31, 43, 44, 59, 57, ?

- Ans
- ☒ 1. 82
 - ☒ 2. 74
 - ☒ 3. 83
 - ☒ 4. 75

Question ID : 26433067869
Option 1 ID : 264330265989
Option 2 ID : 264330265990
Option 3 ID : 264330265991
Option 4 ID : 264330265988
Status : Answered
Chosen Option : 4

Q.27 Which letter-cluster will complete the given series?
BHERZ, DGHTX, FFKVV, _____

- Ans
- ☒ 1. HENWT
 - ☒ 2. GGNXU
 - ☒ 3. HGMWU
 - ☒ 4. HENXT

Question ID : 264330106616
Option 1 ID : 264330418766
Option 2 ID : 264330418768
Option 3 ID : 264330418765
Option 4 ID : 264330418767
Status : Not Attempted and Marked For Review
Chosen Option : --

Q.28 Select the option that is related to the third word in the same way as the second word is related to the first word. (The words must be considered as meaningful words and must not be related to each other based on the number of letters/number of consonants/vowels in the word.)
Nun : Convent :: King : ?

- Ans
- ☒ 1. Palace
 - ☒ 2. Cottage
 - ☒ 3. Prison
 - ☒ 4. Monastery

Question ID : 26433091603
Option 1 ID : 264330359778
Option 2 ID : 264330359777
Option 3 ID : 264330359780
Option 4 ID : 264330359779
Status : Answered
Chosen Option : 1

Q.29 Select the option that represents the correct order of the given words as they would appear in an English dictionary?

- 1.Authority
- 2.Automate
- 3.Authentic
- 4.Auspicious
- 5.Aureole

Ans ☒ 1. 4, 5, 3, 1, 2
☒ 2. 5, 3, 4, 1, 2
☒ 3. 5, 4, 3, 1, 2
☒ 4. 3, 4, 5, 1, 2

Question ID : 26433067246
Option 1 ID : 264330263499
Option 2 ID : 264330263497
Option 3 ID : 264330263498
Option 4 ID : 264330263496
Status : Answered
Chosen Option : 3

Q.30 Seven friends, A, B, C, D, E, F and G, are sitting around a circular table facing the centre (not necessarily in the same order). D is an immediate neighbour of B and C. A is sitting third to the right of C. E is an immediate neighbour of A and F. G is sitting immediate left of C. B is sitting third to the right of G. What is the position of G with respect to A when counted from the right side of A?

Ans ☒ 1. Third to the right
☒ 2. Second to the right
☒ 3. Third to the left
☒ 4. Second to the left

Question ID : 26433056907
Option 1 ID : 264330222613
Option 2 ID : 264330222614
Option 3 ID : 264330222612
Option 4 ID : 264330222615
Status : Not Attempted and Marked For Review
Chosen Option : --

Q.31 Four letter-clusters have been given, out of which three are alike in some manner and one is different. Select the odd letter-cluster.

Ans ☒ 1. KNJZ
☒ 2. FIEU
☒ 3. MJLO
☒ 4. SVRH

Question ID : 264330180753
Option 1 ID : 264330708981
Option 2 ID : 264330708979
Option 3 ID : 264330708980
Option 4 ID : 264330708982
Status : Not Attempted and Marked For Review
Chosen Option : --

Q.32 Three of the following letter-clusters are alike in some manner and one is different.
Select the one that is different.

- Ans ☒ 1. MRVY
☒ 2. GLPS
☒ 3. NSWZ
☒ 4. TGQJ

Question ID : 264330145344

Option 1 ID : 264330569631

Option 2 ID : 264330569632

Option 3 ID : 264330569634

Option 4 ID : 264330569633

Status : Not Attempted and
Marked For Review

Chosen Option : --

Q.33 Which two numbers (not digits) should be interchanged to make the given equation correct?

$$(18 \times 2) - 24 + 10 \times 160 \div 16 + (10 \times 4) = 170$$

- Ans ☒ 1. 2 and 24
☒ 2. 2 and 4
☒ 3. 24 and 18
☒ 4. 16 and 18

Question ID : 264330145307

Option 1 ID : 264330569486

Option 2 ID : 264330569483

Option 3 ID : 264330569485

Option 4 ID : 264330569484

Status : Answered

Chosen Option : 3

Q.34 Select the set in which the numbers are related in the same way as are the numbers of the following sets.

(NOTE : Operations should be performed on the whole numbers, without breaking down the numbers into its constituent digits. E.g. 13- Operations on 13 such as adding/subtracting/multiplying etc. to 13 can be performed. Breaking down 13 into 1 and 3 and then performing mathematical operations on 1 and 3 is not allowed.)
(15, 21, 66)
(9, 17, 44)

- Ans ☒ 1. (2, 4, 12)
☒ 2. (5, 37, 52)
☒ 3. (7, 9, 86)
☒ 4. (11, 13, 35)

Question ID : 26433057456

Option 1 ID : 264330224809

Option 2 ID : 264330224810

Option 3 ID : 264330224808

Option 4 ID : 264330224811

Status : Not Attempted and
Marked For Review


Chosen Option : --


Q.35 Which two signs should be interchanged to make the given equation correct?

$$13 + 145 \div 29 \times 52 - 11 = 106$$

Ans  1. - and ×

 2. × and +

 3. ÷ and -

 4. ÷ and +

Question ID : 264330129525

Option 1 ID : 264330507469

Option 2 ID : 264330507468

Option 3 ID : 264330507466

Option 4 ID : 264330507467

Status : Answered

Chosen Option : 2

Q.36 Which figure from the given options would replace the question mark (?) if the following figure series were to be continued?

R	3	A	□	9	R	3	F	☆	□	A	3	
○	F	9	3	F	☆	S	○	A	F	○	9	?
□	☆	S	S	○	A	□	9	R	R	S	☆	

Ans

✗ 1.

F	S	9
R	A	☆
□	○	3

✗ 2.

R	S	☆
□	A	3
F	○	9

✓ 3.

F	○	9
R	S	☆
□	A	3

✗ 4.

R	9	□
A	○	S
☆	F	3

Question ID : 264330145478

Option 1 ID : 264330570170

Option 2 ID : 264330570167

Option 3 ID : 264330570168

Option 4 ID : 264330570169

Status : Not Attempted and
Marked For Review

Chosen Option : --

Q.37 If M denotes '-', N denotes '+', O denotes 'x', and P denotes '+', then what will come in place of '?' in the following equation?
255 N 5 O 4 P 16 O 3 M 29 = ?

- Ans ☒ 1. 223
☒ 2. 216
☒ 3. 211
☒ 4. 230

Question ID : 26433057631
Option 1 ID : 264330225508
Option 2 ID : 264330225509
Option 3 ID : 264330225511
Option 4 ID : 264330225510
Status : Answered
Chosen Option : 1

Q.38 PRO 5' is related to 'OSQ 15' in a certain way. In the same way, 'OPO 10' is related to 'NQQ 30'. Which of the following is related to 'MAC 9' using the same logic?

- Ans ☒ 1. NZA 3
☒ 2. OZA 3
☒ 3. NZB 3
☒ 4. NZA 27

Question ID : 264330145384
Option 1 ID : 264330569792
Option 2 ID : 264330569791
Option 3 ID : 264330569794
Option 4 ID : 264330569793
Status : Answered
Chosen Option : 4

Q.39 'M \$ K' means 'M is the mother of K'.
'M # K' means 'M is the father of K'.
'M @ K' means 'M is the husband of K'.
'M % K' means 'M is the daughter of K'.
If A \$ C @ R, then how is R related to A?

- Ans ☒ 1. Husband's father
☒ 2. Mother
☒ 3. Son's wife
☒ 4. Daughter

Question ID : 264330145391
Option 1 ID : 264330569822
Option 2 ID : 264330569821
Option 3 ID : 264330569819
Option 4 ID : 264330569820
Status : Answered
Chosen Option : 3

Q.40 If '+' means 'divided by', '-' means 'added to', 'x' means 'subtracted from' and '÷' means 'multiplied by', then what will be the value of the following expression?

$$[(25 \times 13) - (3 \div 3)] + (3 - 4) \div 5$$

- Ans
- ☒ 1. 20
 - ☒ 2. 10
 - ☒ 3. 15
 - ☒ 4. 5

Question ID : 264330130377

Option 1 ID : 264330510622

Option 2 ID : 264330510620

Option 3 ID : 264330510621

Option 4 ID : 264330510619

Status : Not Attempted and
Marked For Review

Chosen Option : --

Q.41 Which of the following numbers will replace the question mark (?) and complete the given number series?

15, 19, 21, 25, 27, ?

- Ans
- ☒ 1. 31
 - ☒ 2. 32
 - ☒ 3. 29
 - ☒ 4. 30

Question ID : 26433067479

Option 1 ID : 264330264429

Option 2 ID : 264330264431

Option 3 ID : 264330264430

Option 4 ID : 264330264428

Status : Answered

Chosen Option : 1

Q.42 Which letter-cluster will replace the question mark (?) to complete the given series?
MMNO, OKPM, ?, SGTI, UEVG

- Ans
- ☒ 1. POKI
 - ☒ 2. QRIL
 - ☒ 3. QIRK
 - ☒ 4. PQIJ

Question ID : 264330180763

Option 1 ID : 264330709022

Option 2 ID : 264330709020

Option 3 ID : 264330709021

Option 4 ID : 264330709019

Status : Not Attempted and
Marked For Review

Chosen Option : --

Q.43 In a certain code language, 'OIL' is coded as 27 and 'CREAM' is coded as 125. How will 'POWDER' be coded in the same language?

- Ans ☒ 1. 225
☒ 2. 216
☒ 3. 198
☒ 4. 169

Question ID : 264330132210

Option 1 ID : 264330517938

Option 2 ID : 264330517937

Option 3 ID : 264330517936

Option 4 ID : 264330517935

Status : Not Attempted and
Marked For Review

Chosen Option : --

Q.44 Given below are two statements and two conclusions. Take the statements to be true even if they are at variance with commonly known facts, and decide whether the conclusion(s) follow(s) the given statements.

Statements:

Some cakes are biscuits.

Some biscuits are chocolates.

Conclusions:

I. Some biscuits are cakes.

II. Some cakes are chocolates.

- Ans ☒ 1. Both the conclusions follow
☒ 2. Only conclusion II follows
☒ 3. Neither conclusion I nor II follows
☒ 4. Only conclusion I follows

Question ID : 26433056639

Option 1 ID : 264330221542

Option 2 ID : 264330221541

Option 3 ID : 264330221543

Option 4 ID : 264330221540

Status : Answered

Chosen Option : 1

Q.45 If I denotes '+', J denotes 'x', K denotes '-' and L denotes '+', then what will come in place of '?' in the following equation?

$$(35 \text{ I } 5) \text{ J } 9 \text{ K } 23 \text{ L } 39 \text{ K } (3 \text{ J } 8) = ?$$

- Ans ☒ 1. 60
☒ 2. 59
☒ 3. 51
☒ 4. 55

Question ID : 264330145339

Option 1 ID : 264330569612

Option 2 ID : 264330569614

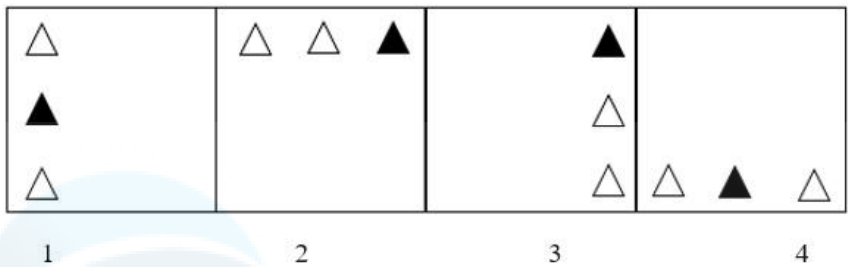
Option 3 ID : 264330569613

Option 4 ID : 264330569611

Status : Answered

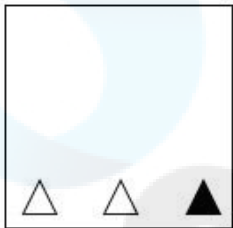
Chosen Option : 4

Q.46 Which of the given figures when placed in the 5th position would continue the series that is established by the first four figures?

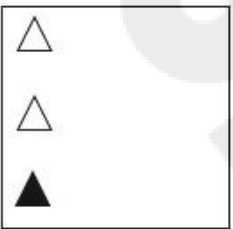


Ans

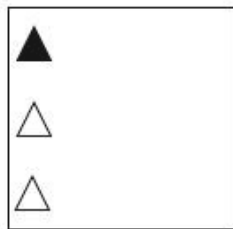
✗ 1.



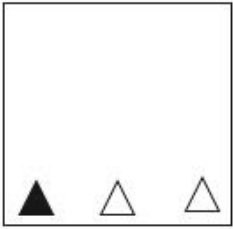
✗ 2.



✓ 3.



✗ 4.



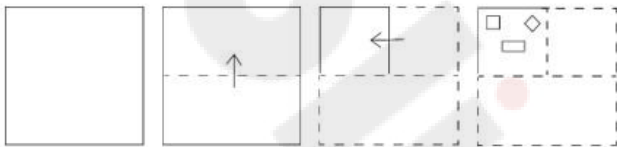
Question ID : 26433087307
Option 1 ID : 264330342867
Option 2 ID : 264330342866
Option 3 ID : 264330342865
Option 4 ID : 264330342868
Status : Not Attempted and Marked For Review
Chosen Option : --

Q.47 A @ B means 'A is the husband of B'
A & B means 'A is the mother of B'
A # B means 'A is the daughter of B'
If Q @ M & Y @ J # R & Z, then how is Y related to Z?

- Ans
- ☒ 1. Brother's wife
 - ☒ 2. Father's sister
 - ☒ 3. Sister's husband
 - ☒ 4. Father

Question ID : 264330126024
Option 1 ID : 264330493768
Option 2 ID : 264330493769
Option 3 ID : 264330493771
Option 4 ID : 264330493770
Status : Not Attempted and Marked For Review
Chosen Option : --

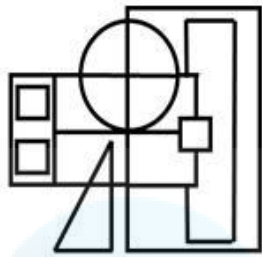
Q.48 A paper is folded and cut as shown below. How will it appear when unfolded?



- Ans
- ☒ 1.
 - ☒ 2.
 - ☒ 3.
 - ☒ 4.

Question ID : 264330103002
Option 1 ID : 264330404399
Option 2 ID : 264330404398
Option 3 ID : 264330404397
Option 4 ID : 264330404400
Status : Not Attempted and Marked For Review
Chosen Option : --

Q.49 Select the option figure which is embedded in the given figure as its part (rotation is NOT allowed).



Ans

- ☒ 1.
- ☒ 2.
- ☒ 3.
- ☒ 4.

Question ID : 264330145465
Option 1 ID : 264330570117
Option 2 ID : 264330570118
Option 3 ID : 264330570116
Option 4 ID : 264330570115
Status : Not Attempted and Marked For Review
Chosen Option : --

Q.50 In a certain code language, 'HIGHLY' is written as 'GRHYOH' and 'CLEVER' is written as 'EOCRVV'. How will 'HORROR' be written in that language?

- Ans
- ☒ 1. JRLPDB
 - ☒ 2. RLHRLR
 - ☒ 3. JPRDER
 - ☒ 4. RKJPED

Question ID : 26433074763
Option 1 ID : 264330293142
Option 2 ID : 264330293141
Option 3 ID : 264330293143
Option 4 ID : 264330293140
Status : Not Answered
Chosen Option : --

Q.1 In India, which of the following modes of transportation reduces trans-shipment losses and delays in supply of petroleum and gas?

- Ans ☒ 1. Pipeline
 ☒ 2. Roadways
 ☒ 3. Railways
 ☒ 4. Waterways

Question ID : 264330132720
Option 1 ID : 264330519978
Option 2 ID : 264330519977
Option 3 ID : 264330519975
Option 4 ID : 264330519976
Status : Answered
Chosen Option : 1

Q.2 From which country has the concept of Martial Law, which restricts Fundamental rights, borrowed?

- Ans ☒ 1. The UK
 ☒ 2. The USSR
 ☒ 3. China
 ☒ 4. Japan

Question ID : 264330113392
Option 1 ID : 264330445654
Option 2 ID : 264330445656
Option 3 ID : 264330445655
Option 4 ID : 264330445653
Status : Answered
Chosen Option : 4

Q.3 Copacabana beach is situated in _____.

- Ans ☒ 1. Peru
 ☒ 2. Australia
 ☒ 3. Mexico
 ☒ 4. Brazil

Question ID : 26433054947
Option 1 ID : 264330214774
Option 2 ID : 264330214772
Option 3 ID : 264330214775
Option 4 ID : 264330214773
Status : Not Attempted and Marked For Review
Chosen Option : --

Q.4 Which of the following is the most widely used method for refining impure metals?

- Ans ☒ 1. Vapour-Phase Refining
 ☒ 2. Poling Refining
 ☒ 3. Electrolytic Refining
 ☒ 4. Liquidation Refining

Question ID : 264330131684
Option 1 ID : 264330515835
Option 2 ID : 264330515838
Option 3 ID : 264330515836
Option 4 ID : 264330515837
Status : Answered
Chosen Option : 3

Q.5 Which of the following is the correct statement?

- Ans ☒ 1. Joule is the unit of work
- ☐ 2. The unit of energy is the watt.
- ☐ 3. Joule/ second is also a unit of energy.
- ☐ 4. The unit of power is joule/newton.

Question ID : 264330111860
Option 1 ID : 264330439527
Option 2 ID : 264330439526
Option 3 ID : 264330439528
Option 4 ID : 264330439525
Status : Answered
Chosen Option : 1

Q.6 Which of the following microfinance institutions was established in India at the time of independence?

- Ans ☐ 1. Joint Liability Group
- ☒ 2. Rural Cooperatives
- ☐ 3. Self Help Group
- ☐ 4. Grameen Model Bank

Question ID : 264330145234
Option 1 ID : 264330569192
Option 2 ID : 264330569191
Option 3 ID : 264330569193
Option 4 ID : 264330569194
Status : Not Attempted and Marked For Review
Chosen Option : --

Q.7 'The Race of my Life' is the autobiography of which of the following sportsmen?

- Ans ☐ 1. PT Usha
- ☐ 2. Mary Kom
- ☒ 3. Milkha Singh
- ☐ 4. Saurav Ganguly

Question ID : 26433071672
Option 1 ID : 264330281115
Option 2 ID : 264330281114
Option 3 ID : 264330281113
Option 4 ID : 264330281112
Status : Answered
Chosen Option : 3

Q.8 Which of the following has been INCORRECTLY listed as a condition for becoming a citizen of India?

- Ans ☐ 1. Citizenship by birth
- ☐ 2. Citizenship by naturalisation
- ☒ 3. Citizenship through acquisition of property
- ☐ 4. Citizenship by descent

Question ID : 264330130475
Option 1 ID : 264330511011
Option 2 ID : 264330511014
Option 3 ID : 264330511013
Option 4 ID : 264330511012
Status : Answered
Chosen Option : 3

Q.9 Which British scientist is known for developing the principle of holography in 1947 to improve the resolution of the electron microscope?

- Ans
- ☒ 1. Werner Heisenberg
 - ☒ 2. Lloyd Cross
 - ☒ 3. Dennis Gabor
 - ☒ 4. Charles Towns

Question ID : 264330141668
Option 1 ID : 264330554994
Option 2 ID : 264330554993
Option 3 ID : 264330554992
Option 4 ID : 264330554991
Status : Answered
Chosen Option : 3

Q.10 The 'Tripartite struggle' was between Gurjara Pratiharas in North India, Palas in Eastern India and _____ in South India.

- Ans
- ☒ 1. Marathas
 - ☒ 2. Rashtrakutas
 - ☒ 3. Cholas
 - ☒ 4. Cheras

Question ID : 264330165356
Option 1 ID : 264330648506
Option 2 ID : 264330648505
Option 3 ID : 264330648504
Option 4 ID : 264330648503
Status : Answered
Chosen Option : 2

Q.11 Who is the author of the novel 'The Moor's Last Sigh'?

- Ans
- ☒ 1. VS Naipaul
 - ☒ 2. John Keay
 - ☒ 3. Kiran Doshi
 - ☒ 4. Salman Rushdie

Question ID : 264330145174
Option 1 ID : 264330568951
Option 2 ID : 264330568953
Option 3 ID : 264330568954
Option 4 ID : 264330568952
Status : Answered
Chosen Option : 4

Q.12 Which of the following dances is based on Rasleela themes of Radha and Krishna?

- Ans
- ☒ 1. Manipuri dance
 - ☒ 2. Sattriya dance
 - ☒ 3. Mohiniyattam
 - ☒ 4. Kathak

Question ID : 264330164790
Option 1 ID : 264330646287
Option 2 ID : 264330646289
Option 3 ID : 264330646290
Option 4 ID : 264330646288
Status : Answered
Chosen Option : 3

Q.13 Who among the following was the last Mauryan ruler and was killed by his commander-in-chief?

- Ans ☒ 1. Shatadhanvan
☒ 2. Bindusara
☒ 3. Brihadratha
☒ 4. Dashratha

Question ID : 264330165558

Option 1 ID : 264330649314

Option 2 ID : 264330649312

Option 3 ID : 264330649313

Option 4 ID : 264330649311

Status : Not Attempted and
Marked For Review

Chosen Option : --

Q.14 Which writ is issued when the court finds that there is unlawful arrest of a person?

- Ans ☒ 1. Prohibition
☒ 2. Mandamus
☒ 3. Quo warranto
☒ 4. Habeas corpus

Question ID : 264330116397

Option 1 ID : 264330457675

Option 2 ID : 264330457674

Option 3 ID : 264330457676

Option 4 ID : 264330457673

Status : Answered

Chosen Option : 4

Q.15 Who among the following founded an expatriate Communist Party of India at Tashkent in 1920?

- Ans ☒ 1. PC Joshi
☒ 2. Shripad Amrut Dange
☒ 3. Jolly Kaul
☒ 4. MN Roy

Question ID : 264330106615

Option 1 ID : 264330418762

Option 2 ID : 264330418761

Option 3 ID : 264330418763

Option 4 ID : 264330418764

Status : Answered

Chosen Option : 4

Q.16 Which of the following statements is correct?

- Ans ☒ 1. The transport of male gametes in Gymnosperms occurs through water.
- ☒ 2. The transport of male gametes in bryophytes and pteridophytes occurs through water.
- ☒ 3. The transport of male gametes in bryophytes and pteridophytes occurs through air.
- ☒ 4. The transport of male gametes in angiosperms occurs through water.

Question ID : 26433089668
Option 1 ID : 264330352173
Option 2 ID : 264330352176
Option 3 ID : 264330352175
Option 4 ID : 264330352174
Status : Not Attempted and Marked For Review
Chosen Option : --

Q.17 Which Union Territory recorded the highest male literacy rate, according to the 2011 Census?

- Ans ☒ 1. Daman and Diu
- ☒ 2. Delhi
- ☒ 3. Andaman and Nicobar Islands
- ☒ 4. Lakshadweep

Question ID : 264330110659
Option 1 ID : 264330434916
Option 2 ID : 264330434913
Option 3 ID : 264330434915
Option 4 ID : 264330434914
Status : Answered
Chosen Option : 2

Q.18 Pandit Ravi Shankar popularised which instrument in particular all over the world?

- Ans ☒ 1. Sitar
- ☒ 2. Tabla
- ☒ 3. Veena
- ☒ 4. Harmonium

Question ID : 26433074853
Option 1 ID : 264330293503
Option 2 ID : 264330293500
Option 3 ID : 264330293501
Option 4 ID : 264330293502
Status : Answered
Chosen Option : 1

Q.19 According to the Census of India 2011, which metropolitan city has the highest population?

- Ans ☒ 1. Mumbai
☐ 2. Kolkata
☐ 3. Chennai
☐ 4. Patna

Question ID : 264330166806
Option 1 ID : 264330654259
Option 2 ID : 264330654261
Option 3 ID : 264330654260
Option 4 ID : 264330654262
Status : Answered
Chosen Option : 1

Q.20 Ker and Garia Puja are traditional tribal festivals of which state?

- Ans ☐ 1. Jharkhand
☐ 2. Manipur
☐ 3. Odisha
☒ 4. Tripura

Question ID : 264330164806
Option 1 ID : 264330646351
Option 2 ID : 264330646354
Option 3 ID : 264330646352
Option 4 ID : 264330646353
Status : Not Attempted and Marked For Review
Chosen Option : --

Q.21 Which company has been given the responsibility of construction, operation and maintenance of the Hazira-Vijaipur-Jagdishpur (HVJ) pipeline project?

- Ans ☐ 1. TATA Petrodyne Limited (TPL)
☐ 2. Oil and Natural Gas Corporation (ONGC)
☒ 3. Gas Authority of India (GAIL)
☐ 4. Reliance Industries Limited (RIL)

Question ID : 264330111326
Option 1 ID : 264330437390
Option 2 ID : 264330437389
Option 3 ID : 264330437392
Option 4 ID : 264330437391
Status : Not Attempted and Marked For Review
Chosen Option : --

Q.22 Mawsynram, the place that receives the highest rainfall in the world, is situated in which hills?

- Ans
- ☒ 1. Patkai Hills
 - ☒ 2. Mishmi Hills
 - ☒ 3. Rajmahal Hills
 - ☒ 4. Khasi Hills

Question ID : 264330119785
Option 1 ID : 264330469418
Option 2 ID : 264330469415
Option 3 ID : 264330469416
Option 4 ID : 264330469417
Status : Answered
Chosen Option : 4

Q.23 Which of the following organisations was founded in Poona, Satara and other towns of Maharashtra that worked against Brahmanical orthodoxy and tried to reform Hinduism?

- Ans
- ☒ 1. Brahmo Samaj
 - ☒ 2. Paramahansa Mandali
 - ☒ 3. Ramakrishna Mission
 - ☒ 4. Arya Samaj

Question ID : 264330165399
Option 1 ID : 264330648678
Option 2 ID : 264330648675
Option 3 ID : 264330648676
Option 4 ID : 264330648677
Status : Answered
Chosen Option : 4

Q.24 In 1784, who discovered the composition of water through his experiment with hydrogen and oxygen?

- Ans
- ☒ 1. Henry Cavendish
 - ☒ 2. Herbert C Brown
 - ☒ 3. Joseph Priestley
 - ☒ 4. John Dalton

Question ID : 264330145222
Option 1 ID : 264330569146
Option 2 ID : 264330569143
Option 3 ID : 264330569145
Option 4 ID : 264330569144
Status : Answered
Chosen Option : 1

Q.25 Under which strata do trees fall?

- Ans ☒ 1. Second vertical
☒ 2. Top vertical
☒ 3. Middle vertical
☒ 4. Bottom vertical

Question ID : 264330145214
Option 1 ID : 264330569112
Option 2 ID : 264330569111
Option 3 ID : 264330569113
Option 4 ID : 264330569114
Status : Not Attempted and Marked For Review
Chosen Option : --

Q.26 The fundamental duties were added in the Indian Constitution on the recommendation of the:

- Ans ☒ 1. Balwant Rai Mehta Committee
☒ 2. Bibek Debroy Committee
☒ 3. LM Singhvi Committee
☒ 4. Sardar Swaran Singh Committee

Question ID : 264330111511
Option 1 ID : 264330438129
Option 2 ID : 264330438132
Option 3 ID : 264330438131
Option 4 ID : 264330438130
Status : Answered
Chosen Option : 4

Q.27 Which of the following is the correct formula for moment of inertia?

- Ans ☒ 1. $I = mr^2$
☒ 2. $I = rm^2$
☒ 3. $I = m/r^2$
☒ 4. $I = 2mr$

Question ID : 264330111862
Option 1 ID : 264330439534
Option 2 ID : 264330439536
Option 3 ID : 264330439533
Option 4 ID : 264330439535
Status : Answered
Chosen Option : 1

Q.28 Which of the following Articles of the Indian Constitution deals with the relationship between the Prime Minister and the President?

- Ans ☒ 1. Article 45
☒ 2. Article 25
☒ 3. Article 35
☒ 4. Article 75

Question ID : 264330113416
Option 1 ID : 264330445749
Option 2 ID : 264330445751
Option 3 ID : 264330445752
Option 4 ID : 264330445750
Status : Answered
Chosen Option : 4

Q.29 India's rank in Tokyo Olympic 2020 is:

- Ans ☒ 1. 49
☒ 2. 48
☒ 3. 47
☒ 4. 46

Question ID : 264330109684

Option 1 ID : 264330431016

Option 2 ID : 264330431015

Option 3 ID : 264330431014

Option 4 ID : 264330431013

Status : Not Attempted and
Marked For Review

Chosen Option : --

Q.30 In which of the following years was the Muslim League formed?

- Ans ☒ 1. 1915
☒ 2. 1909
☒ 3. 1906
☒ 4. 1912

Question ID : 264330112345

Option 1 ID : 264330441465

Option 2 ID : 264330441467

Option 3 ID : 264330441468

Option 4 ID : 264330441466

Status : Answered

Chosen Option : 2

Q.31 The Chambal, Hindon and Tons rivers are tributaries of the river:

- Ans ☒ 1. Yamuna
☒ 2. Mahanadi
☒ 3. Kaveri
☒ 4. Tapi

Question ID : 264330169992

Option 1 ID : 264330666643

Option 2 ID : 264330666645

Option 3 ID : 264330666644

Option 4 ID : 264330666646

Status : Not Attempted and
Marked For Review

Chosen Option : --

Q.32 Prabhat Sarma, a recipient of Sangeet Natak Akademi Award, was a _____ player from Assam.

- Ans ☒ 1. Ghatam
☒ 2. Flute
☒ 3. Tabla
☒ 4. sarangi

Question ID : 264330145158

Option 1 ID : 264330568890

Option 2 ID : 264330568887

Option 3 ID : 264330568889

Option 4 ID : 264330568888

Status : Not Attempted and
Marked For Review

Chosen Option : --

Q.33 Mehrangarh fort is located in which of the following cities?

- Ans ☒ 1. Jaipur
☒ 2. Kota
☒ 3. Jodhpur
☒ 4. Bikaner

Question ID : 264330164850

Option 1 ID : 264330646528

Option 2 ID : 264330646529

Option 3 ID : 264330646530

Option 4 ID : 264330646527

Status : Not Attempted and
Marked For Review

Chosen Option : --

Q.34 During a game of hockey, following an offence, if a player is shown a yellow card then he will be sent off the pitch for _____.

- Ans ☒ 1. 5 minutes
☒ 2. 6 minutes
☒ 3. 4 minutes
☒ 4. 3 minutes

Question ID : 264330109854

Option 1 ID : 264330431695

Option 2 ID : 264330431696

Option 3 ID : 264330431694

Option 4 ID : 264330431693

Status : Answered

Chosen Option : 1

Q.35 Trade liberalisation has helped India improve its _____ in industries with medium-to-high technology content.

- Ans
- ☐ 1. imports
 - ☐ 2. fuel efficiency
 - ☐ 3. labour intensity
 - ☒ 4. comparative advantage

Question ID : 26433064580
Option 1 ID : 264330252912
Option 2 ID : 264330252915
Option 3 ID : 264330252913
Option 4 ID : 264330252914
Status : Answered
Chosen Option : 1

Q.36 Which of the following five-year plan addressed the issue of removal of poverty as a chief objective for the first time?

- Ans
- ☐ 1. Fourth Five-year Plan
 - ☐ 2. Third Five-year Plan
 - ☐ 3. Sixth Five-year Plan
 - ☒ 4. Fifth Five-year Plan

Question ID : 264330145228
Option 1 ID : 264330569168
Option 2 ID : 264330569167
Option 3 ID : 264330569170
Option 4 ID : 264330569169
Status : Answered
Chosen Option : 4

Q.37 Which of the following was the first B vitamin discovered in 1897 that is essential in amino acid and carbohydrate metabolism and is active in energy production reactions?

- Ans
- ☐ 1. Biotin
 - ☐ 2. Riboflavin
 - ☒ 3. Thiamine
 - ☐ 4. Folate

Question ID : 264330145202
Option 1 ID : 264330569065
Option 2 ID : 264330569064
Option 3 ID : 264330569063
Option 4 ID : 264330569066
Status : Not Attempted and Marked For Review
Chosen Option : --

Q.38 Identify the cultural festival on the basis of given clues:

i) This festival brings together craftsmen like potters, embroiderers, weavers, wood carvers, metal workers, stone smiths and painters from all over India on one platform in Haryana.

ii) This crafts mela is held in February every year and provides a glimpse of the state's cultural heritage and recent achievements.

- Ans
- ☒ 1. Kapil Muni Fair
 - ☒ 2. Shamlaji Fair
 - ☒ 3. Chitra Vichitra Fair
 - ☒ 4. Surajkund Mela

Question ID : 26433054217

Option 1 ID : 264330211853

Option 2 ID : 264330211852

Option 3 ID : 264330211855

Option 4 ID : 264330211854

Status : Not Attempted and
Marked For Review

Chosen Option : --

Q.39 The duration of the 12th five year plan was from _____ to _____.

- Ans
- ☒ 1. 2012 - 2017
 - ☒ 2. 1987 - 1992
 - ☒ 3. 2007 - 2012
 - ☒ 4. 1990 - 1995

Question ID : 264330145251

Option 1 ID : 264330569259

Option 2 ID : 264330569262

Option 3 ID : 264330569260

Option 4 ID : 264330569261

Status : Answered

Chosen Option : 1

Q.40 Manisha Kalyan is associated with which of the following sports events?

- Ans
- ☒ 1. Football
 - ☒ 2. Hockey
 - ☒ 3. Cricket
 - ☒ 4. Chess

Question ID : 264330109689

Option 1 ID : 264330431033

Option 2 ID : 264330431034

Option 3 ID : 264330431035

Option 4 ID : 264330431036

Status : Not Attempted and
Marked For Review

Chosen Option : --

Q.41 A Governor shall, notwithstanding the expiration of his term, continue to hold office until _____.

- Ans
- ☒ 1. the President's consent
 - ☒ 2. the Legislative Secretary takes charge
 - ☒ 3. his/her successor enters his/her office
 - ☒ 4. he/she has aid and advice of the Chief Minister

Question ID : 264330145265
Option 1 ID : 264330569316
Option 2 ID : 264330569315
Option 3 ID : 264330569318
Option 4 ID : 264330569317
Status : Answered
Chosen Option : 1

Q.42 A government budget shows a primary deficit of ₹6,900 crore. The revenue expenditure on interest payment is ₹400 crore. Fiscal deficit is equal to:

- Ans
- ☒ 1. ₹6,500 crore
 - ☒ 2. ₹7,300 crore
 - ☒ 3. ₹7,100 crore
 - ☒ 4. ₹6,900 crore

Question ID : 264330145254
Option 1 ID : 264330569272
Option 2 ID : 264330569271
Option 3 ID : 264330569274
Option 4 ID : 264330569273
Status : Answered
Chosen Option : 2

Q.43 The office of Diwan-i-Insha dealt with which affair in administration?

- Ans
- ☒ 1. State correspondence
 - ☒ 2. Military
 - ☒ 3. Finance
 - ☒ 4. Religious affairs

Question ID : 264330109006
Option 1 ID : 264330428301
Option 2 ID : 264330428303
Option 3 ID : 264330428304
Option 4 ID : 264330428302
Status : Not Attempted and Marked For Review
Chosen Option : --

Q.44 The earth's perihelion occurs in:

- Ans
- ☒ 1. July
 - ☒ 2. October
 - ☒ 3. January
 - ☒ 4. September

Question ID : 264330131737
Option 1 ID : 264330516048
Option 2 ID : 264330516050
Option 3 ID : 264330516047
Option 4 ID : 264330516049
Status : Answered
Chosen Option : 4

Q.45 Guru Bipin Singh, who received the honour of Sangeet Natak Akademi Award in 1966 and the Kalidas Samman by Madhya Pradesh Government, was an exponent of which of the following Indian classical dance forms?

- Ans ☒ 1. Odissi
☒ 2. Manipuri
☒ 3. Kuchipudi
☒ 4. Kathak

Question ID : 264330145153
Option 1 ID : 264330568867
Option 2 ID : 264330568870
Option 3 ID : 264330568869
Option 4 ID : 264330568868
Status : Answered
Chosen Option : 2

Q.46 Who among the following was the youngest recipient of the Padma Vibhushan award in dance in 1984?

- Ans ☒ 1. Birju Maharaj
☒ 2. Rajendra Gangani
☒ 3. Abhimanyu Lal
☒ 4. Ehshan Hilal

Question ID : 26433054504
Option 1 ID : 264330213002
Option 2 ID : 264330213000
Option 3 ID : 264330213003
Option 4 ID : 264330213001
Status : Not Attempted and Marked For Review
Chosen Option : --

Q.47 When was the Indian Meteorological Department, Which collects data on temperature, rainfall, wind, etc., and makes weather forecasts, established by the Government of India?

- Ans ☒ 1. 1879
☒ 2. 1876
☒ 3. 1875
☒ 4. 1873

Question ID : 264330145191
Option 1 ID : 264330569022
Option 2 ID : 264330569021
Option 3 ID : 264330569020
Option 4 ID : 264330569019
Status : Not Attempted and Marked For Review
Chosen Option : --

Q.48 What is the percentage of proteins in the cell membrane?

- Ans ☒ 1. 60-80%
- ☒ 2. 80-100%
- ☒ 3. 20-40%
- ☒ 4. 40-60%

Question ID : 26433086610
Option 1 ID : 264330340083
Option 2 ID : 264330340084
Option 3 ID : 264330340081
Option 4 ID : 264330340082
Status : Answered
Chosen Option : 4

Q.49 Syed Modi India International is organised in which sporting event?

- Ans ☒ 1. Kabaddi
- ☒ 2. Volleyball
- ☒ 3. Chess
- ☒ 4. Badminton

Question ID : 264330119247
Option 1 ID : 264330467278
Option 2 ID : 264330467275
Option 3 ID : 264330467277
Option 4 ID : 264330467276
Status : Not Attempted and Marked For Review
Chosen Option : --

Q.50 Which dance form of Goa is also known as the 'Warrior Dance'?

- Ans ☒ 1. Bihu
- ☒ 2. Lavani
- ☒ 3. Ghode Modni
- ☒ 4. Rauf

Question ID : 26433092388
Option 1 ID : 264330362841
Option 2 ID : 264330362844
Option 3 ID : 264330362842
Option 4 ID : 264330362843
Status : Answered
Chosen Option : 3

Q.1 Sukhvir purchased some perishable items for sale but 30% of those items could not be sold and went bad. However, Sukhvir managed to sell the rest of the items at a price that helped him earn an overall profit of 19%. At what percentage above the cost price of each item purchased by Sukhvir did he sell each of the items that did not go bad?

- Ans
- ☒ 1. 49%
 - ☒ 2. 70%
 - ☒ 3. 63%
 - ☒ 4. 75%

Question ID : 264330103260

Option 1 ID : 264330405346

Option 2 ID : 264330405347

Option 3 ID : 264330405345

Option 4 ID : 264330405348

Status : Not Attempted and
Marked For Review

Chosen Option : --

Q.2 An item with a marked price of ₹1,940 was sold at a discount of 15%. At what price (in ₹) was the item sold?

- Ans
- ☒ 1. 1659
 - ☒ 2. 1639
 - ☒ 3. 1649
 - ☒ 4. 1654

Question ID : 264330131157

Option 1 ID : 264330513739

Option 2 ID : 264330513741

Option 3 ID : 264330513740

Option 4 ID : 264330513742

Status : Answered

Chosen Option : 3

Q.3 A hostel mess requires 217 eggs for a week. How many eggs will it require in total for the months of July, August and September?

- Ans
- ☒ 1. 2821
 - ☒ 2. 2883
 - ☒ 3. 2852
 - ☒ 4. 2790

Question ID : 264330103974

Option 1 ID : 264330408197

Option 2 ID : 264330408200

Option 3 ID : 264330408198

Option 4 ID : 264330408199

Status : Answered

Chosen Option : 1

Q.4 Find the greatest number which when divides 261, 853 and 1221, leaves a remainder of 5 in each case.

- Ans ☒ 1. 19
☒ 2. 18
☒ 3. 17
☒ 4. 16

Question ID : 26433073062

Option 1 ID : 264330286443

Option 2 ID : 264330286442

Option 3 ID : 264330286441

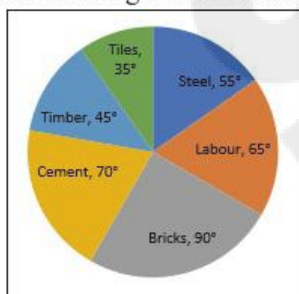
Option 4 ID : 264330286440

Status : Not Attempted and
Marked For Review

Chosen Option : --

Q.5 Study the given pie-chart and answer the question that follows.

The pie-chart shows total expenditure of ₹3,00,00,000 on different items for constructing a flat in a town.



The percentage of the total expenditure on Labour and Timber is:

- Ans ☒ 1. $30\frac{5}{9}\%$
☒ 2. $30\frac{1}{3}\%$
☒ 3. $30\frac{1}{9}\%$
☒ 4. $30\frac{7}{9}\%$

Question ID : 264330158282

Option 1 ID : 264330620488

Option 2 ID : 264330620490

Option 3 ID : 264330620487

Option 4 ID : 264330620489

Status : Not Attempted and
Marked For Review

Chosen Option : --

Q.6 What is the number of valid votes cast in favour of a candidate in an election, if the candidate received 75% of the total valid votes, and 5% of the total votes were declared invalid, given that the total number of voters was 1,46,000?

- Ans
- ☒ 1. 1,06,650
 - ☒ 2. 1,10,250
 - ☒ 3. 1,04,025
 - ☒ 4. 1,08,850

Question ID : 264330157711
Option 1 ID : 264330618205
Option 2 ID : 264330618203
Option 3 ID : 264330618206
Option 4 ID : 264330618204
Status : Not Attempted and Marked For Review
Chosen Option : --

Q.7 A conical shape vessel has a radius of 21 cm and has a slant height of 25 cm. If the curved part of the vessel is to be painted white, find the cost (in ₹) of painting at the rate of ₹1.5 per cm².

- Ans
- ☒ 1. 2475
 - ☒ 2. 1650
 - ☒ 3. 825
 - ☒ 4. 1250

Question ID : 264330145104
Option 1 ID : 264330568674
Option 2 ID : 264330568671
Option 3 ID : 264330568672
Option 4 ID : 264330568673
Status : Not Attempted and Marked For Review
Chosen Option : --

Q.8 P and Q can do a work together in 30 days. Q and R can do the same work together in 24 days and R and P together in 20 days. They started the work together, but Q and R left after 10 days. How many more days will P take to finish the remaining work?

- Ans
- ☒ 1. 23
 - ☒ 2. 21
 - ☒ 3. 18
 - ☒ 4. 19

Question ID : 264330122719
Option 1 ID : 264330480974
Option 2 ID : 264330480973
Option 3 ID : 264330480971
Option 4 ID : 264330480972
Status : Not Attempted and Marked For Review
Chosen Option : --

Q.9 Find the greatest possible length (in metres) that can be used to exactly measure the lengths 6 m, 5 m 25 cm and 12 m 50 cm.

Ans ☒ 1. 0.25 m

☐ 2. 0.75 m

☐ 3. 0.90 m

☐ 4. 0.35 m

Question ID : 26433073063

Option 1 ID : 264330286447

Option 2 ID : 264330286445

Option 3 ID : 264330286444

Option 4 ID : 264330286446

Status : Not Attempted and
Marked For Review

Chosen Option : --

Q.10 In a village election, Sharuk got 80% of the total valid votes. 10% of the votes were invalid. If the total number of votes was 4500, then find the number of valid votes the other candidate got.

Ans ☐ 1. 620

☐ 2. 450

☐ 3. 530

☒ 4. 810

Question ID : 264330145071

Option 1 ID : 264330568540

Option 2 ID : 264330568539

Option 3 ID : 264330568541

Option 4 ID : 264330568542

Status : Not Attempted and
Marked For Review

Chosen Option : --

Q.11 What will be the difference between the total surface area and the curved surface area of a hemisphere having 4 cm diameter?

Ans ☐ 1. $5\pi \text{ cm}^2$

☐ 2. $8\pi \text{ cm}^2$

☒ 3. $4\pi \text{ cm}^2$

☐ 4. $4.4\pi \text{ cm}^2$

Question ID : 264330104374

Option 1 ID : 264330409800

Option 2 ID : 264330409798

Option 3 ID : 264330409797

Option 4 ID : 264330409799

Status : Not Attempted and
Marked For Review

Chosen Option : --

Q.12 A can do a piece of work in 8 days, while B can do it in 7 days. If they work at it alternately beginning with A, then in how many days will the work be completed?

Ans ☒ 1. 8

☒ 2. $8\frac{1}{2}$

☒ 3. $7\frac{1}{2}$

☒ 4. 7

Question ID : 26433082414

Option 1 ID : 264330323491

Option 2 ID : 264330323492

Option 3 ID : 264330323490

Option 4 ID : 264330323489

Status : Answered

Chosen Option : 3

Q.13 The cost of painting the total surface area of a 30 m high solid right circular cylinder at the rate of ₹25 per m^2 is ₹18,425. What is the volume (in m^3) of this cylinder [use $\pi = \frac{22}{7}$]?

Ans ☒ 1. 1145

☒ 2. 1210

☒ 3. 1155

☒ 4. 1122

Question ID : 264330122876

Option 1 ID : 264330481571

Option 2 ID : 264330481574

Option 3 ID : 264330481573

Option 4 ID : 264330481572

Status : Not Attempted and Marked For Review

Chosen Option : --

Q.14 What is the length (in cm) of the transverse common tangent between two circles with radii 6 cm and 4 cm, given that the distance between their centres is 14 cm?

Ans ☒ 1. $2\sqrt{6}$

☒ 2. $4\sqrt{6}$

☒ 3. $5\sqrt{6}$

☒ 4. $3\sqrt{6}$

Question ID : 264330163486

Option 1 ID : 264330641203

Option 2 ID : 264330641205

Option 3 ID : 264330641206

Option 4 ID : 264330641204

Status : Not Attempted and Marked For Review

Chosen Option : --

Q.15 The value of $(1 + \sin^4 A - \cos^4 A) \operatorname{cosec}^2 A$ is:

- Ans ☒ 1. -2
☒ 2. 2
☒ 3. 1
☒ 4. -1

Question ID : 264330157758

Option 1 ID : 264330618394

Option 2 ID : 264330618393

Option 3 ID : 264330618391

Option 4 ID : 264330618392

Status : Not Attempted and
Marked For Review

Chosen Option : --

Q.16 The table given below shows the number of products sold by 4 shopkeepers A, B, C and D on four different days.

person Days	A	B	C	D
Monday	1000	800	-	750
Tuesday	500	-	900	650
Wednesday	800	1000	700	-
Thursday	-	1200	800	900

If the total products sold by A and B, including all four days, is 3000 and 3500, respectively, the products sold by B on Tuesday is how many more or less than the products sold by A on Thursday?

- Ans ☒ 1. 300 more
☒ 2. 200 less
☒ 3. 200 more
☒ 4. 300 less

Question ID : 264330167246

Option 1 ID : 264330655982

Option 2 ID : 264330655979

Option 3 ID : 264330655980

Option 4 ID : 264330655981

Status : Not Attempted and
Marked For Review

Chosen Option : --

Q.17 If an amount of ₹80 becomes ₹96 in 2 years in a bank account which gives simple annual interest, then an amount of ₹62,000 will become _____ in the same account after 5 years.

- Ans ☒ 1. ₹88,200
☒ 2. ₹84,600
☒ 3. ₹82,400
☒ 4. ₹93,000

Question ID : 264330117926

Option 1 ID : 264330463522

Option 2 ID : 264330463520

Option 3 ID : 264330463519

Option 4 ID : 264330463521

Status : Not Attempted and
Marked For Review

Chosen Option : --

Q.18

If $a \propto b$, $b \propto \frac{1}{c}$ and $c \propto d$, then the relation between a and d is:

Ans

✓ 1. $a \propto \frac{1}{d}$

✗ 2. $a \propto d$

✗ 3. $a \propto d^2$

✗ 4. $a \propto \sqrt{d}$

Question ID : 264330145072

Option 1 ID : 264330568544

Option 2 ID : 264330568543

Option 3 ID : 264330568545

Option 4 ID : 264330568546

Status : Answered

Chosen Option : 1

Q.19 Study the given table and answer the question that follows.

The table shows the production of five types of cars P, Q, R, S and T by a company from the year 1989 to 1994.

Type of Car	1989	1990	1991	1992	1993	1994	Total
P	8	20	16	17	21	6	88
Q	16	10	14	12	12	14	78
R	21	17	16	15	13	8	90
S	4	6	10	16	20	31	87
T	25	18	19	30	14	27	133
Total	74	71	75	90	80	86	476

During the period 1989-94, which type of car featured a continuous increase in production?

Ans

✓ 1. S

✗ 2. Q

✗ 3. R

✗ 4. P

Question ID : 264330165465

Option 1 ID : 264330648942

Option 2 ID : 264330648940

Option 3 ID : 264330648941

Option 4 ID : 264330648939

Status : Answered

Chosen Option : 4

Q.20

Evaluate $6.9 - [8.6 - \{6.5 - (5.4 - 4.3 - 2)\}]$.

Ans

✗ 1. 1.8

✗ 2. 1.9

✗ 3. 1.6

✓ 4. 1.7

Question ID : 26433063983

Option 1 ID : 264330250526

Option 2 ID : 264330250527

Option 3 ID : 264330250525

Option 4 ID : 264330250524

Status : Not Attempted and Marked For Review

Chosen Option : --

Q.21 A thief is noticed by a policeman from a distance of 300 m. The thief starts running and the policeman starts chasing him. The thief and policeman run at the rate of 11 km/h and 13 km/h, respectively. After running for how many kilometres will the policeman be able to catch the thief?

- Ans
- ☒ 1. 1.65
 - ☒ 2. 1.85
 - ☒ 3. 1.75
 - ☒ 4. 1.95

Question ID : 26433082987

Option 1 ID : 264330325781

Option 2 ID : 264330325783

Option 3 ID : 264330325782

Option 4 ID : 264330325784

Status : Not Attempted and
Marked For Review

Chosen Option : --

Q.22 A sum of ₹1,00,000 was taken from a bank at the rate of 7% p.a to be compounded annually for 5 years. Calculate the compound interest. (Closest to a ₹)

- Ans
- ☒ 1. ₹40,000
 - ☒ 2. ₹20,963
 - ☒ 3. ₹40,567
 - ☒ 4. ₹40,255

Question ID : 264330145083

Option 1 ID : 264330568587

Option 2 ID : 264330568590

Option 3 ID : 264330568589

Option 4 ID : 264330568588

Status : Not Attempted and
Marked For Review

Chosen Option : --

Q.23 The curved surface area of a cone whose base radius is 7 cm and slant height is 10 cm is:

- Ans
- ☒ 1. 280 cm^2
 - ☒ 2. 250 cm^2
 - ☒ 3. 300 cm^2
 - ☒ 4. 220 cm^2

Question ID : 264330103753

Option 1 ID : 264330407319

Option 2 ID : 264330407318

Option 3 ID : 264330407320

Option 4 ID : 264330407317

Status : Not Attempted and
Marked For Review

Chosen Option : --

Q.24 A sector of a circle has a central angle of 45° and an arc length of 22 cm.
Find the radius of the circle. (Use $\pi = \frac{22}{7}$.)

- Ans
- ☒ 1. 32 cm
 - ☒ 2. 35 cm
 - ☒ 3. 28 cm
 - ☒ 4. 36 cm

Question ID : 264330163481

Option 1 ID : 264330641185

Option 2 ID : 264330641183

Option 3 ID : 264330641184

Option 4 ID : 264330641186

Status : **Not Attempted and
Marked For Review**

Chosen Option : --

Q.25 The least common multiple of 210, 336 and 504 is :

- Ans
- ☒ 1. 5040
 - ☒ 2. 3360
 - ☒ 3. 2100
 - ☒ 4. 4560

Question ID : 26433066160

Option 1 ID : 264330259173

Option 2 ID : 264330259172

Option 3 ID : 264330259174

Option 4 ID : 264330259175

Status : **Not Attempted and
Marked For Review**

Chosen Option : --

Q.26 The LCM of $\frac{1}{3}$, $\frac{3}{5}$, $\frac{4}{7}$ and $\frac{9}{16}$ is:

- Ans
- ☒ 1. 36
 - ☒ 2. 49
 - ☒ 3. 38
 - ☒ 4. 81

Question ID : 264330145041

Option 1 ID : 264330568419

Option 2 ID : 264330568421

Option 3 ID : 264330568420

Option 4 ID : 264330568422

Status : **Not Attempted and
Marked For Review**

Chosen Option : --

Q.27 Study the given table and answer the question that follows.

The table shows the number of students doing various courses in various cities.

City	MBA	MCA	M.Sc.	M.Com.	M.A.	Total
Ahmedabad	1234	1384	1440	1289	1332	6679
Bengaluru	1156	1783	1874	1003	1340	7156
Bhopal	1187	1347	1532	1321	1486	6873
Chennai	1342	1473	1129	1765	1666	7375
New Delhi	1230	1098	1128	1865	1777	7098
Hyderabad	1456	1234	1556	1653	1789	7688
Kolkata	1239	1785	1865	1504	1762	8155

In Chennai, the number of students in MBA is nearly what percentage of students in M.A? (rounded off to 2 digits after decimal)

- Ans
- ☒ 1. 76.25%
 - ☒ 2. 80.55%
 - ☒ 3. 92.12%
 - ☒ 4. 99.23%

Question ID : 264330145102

Option 1 ID : 264330568663

Option 2 ID : 264330568664

Option 3 ID : 264330568665

Option 4 ID : 264330568666

Status : Not Attempted and
Marked For Review

Chosen Option : --

Q.28

If $\cos A = \frac{15}{17}$, $0 \leq A \leq 90^\circ$, then the value of $\cot(90^\circ - A)$ is:

- Ans
- ☒ 1. $\frac{8}{15}$
 - ☒ 2. $\frac{2\sqrt{2}}{15}$
 - ☒ 3. $\frac{\sqrt{2}}{15}$
 - ☒ 4. $\frac{7}{15}$

Question ID : 264330157751

Option 1 ID : 264330618364

Option 2 ID : 264330618366

Option 3 ID : 264330618365

Option 4 ID : 264330618363

Status : Answered

Chosen Option : 1

Q.29 Study the given table and answer the question that follows.

The table shows the number of cakes sold by four different bakeries in 4 different months.

Month \ Bakery	August	September	October	November
P	250	241	213	168
Q	175	189	201	122
R	164	145	129	168
S	224	154	184	209

What is the difference between the total number of cakes sold by bakeries Q and S together in September and the total number of cakes sold by bakeries P and R together in November?

- Ans
- ✓ 1. 7
 - ✗ 2. 9
 - ✗ 3. 10
 - ✗ 4. 8

Question ID : 264330158259
Option 1 ID : 264330620398
Option 2 ID : 264330620396
Option 3 ID : 264330620395
Option 4 ID : 264330620397
Status : Not Attempted and Marked For Review
Chosen Option : --

Q.30 The volume of a right circular cone having a base diameter of 14 cm is $196\pi \text{ cm}^3$. Find the perpendicular height of this cone

- Ans
- ✗ 1. 10 cm
 - ✓ 2. 12 cm
 - ✗ 3. 14 cm
 - ✗ 4. 8 cm

Question ID : 264330145117
Option 1 ID : 264330568724
Option 2 ID : 264330568725
Option 3 ID : 264330568726
Option 4 ID : 264330568723
Status : Not Attempted and Marked For Review
Chosen Option : --

Q.31

Find the LCM of $\frac{3}{2}$, $\frac{81}{16}$ and $\frac{9}{8}$.

Ans

✗ 1. $\frac{91}{2}$

✓ 2. $\frac{81}{2}$

✗ 3. $\frac{111}{2}$

✗ 4. $\frac{101}{2}$

Question ID : 26433080080

Option 1 ID : 264330314269

Option 2 ID : 264330314268

Option 3 ID : 264330314271

Option 4 ID : 264330314270

Status : Not Attempted and
Marked For Review

Chosen Option : --

Q.32

If $\frac{A}{L} + \frac{M}{B} = 1$ and $\frac{B}{M} + \frac{N}{C} = 1$, then the value of $\frac{L}{A} + \frac{C}{N}$ is:

Ans

✗ 1. $\frac{B}{M}$

✗ 2. 0

✓ 3. 1

✗ 4. $\frac{M}{B}$

Question ID : 264330157777

Option 1 ID : 264330618470

Option 2 ID : 264330618468

Option 3 ID : 264330618467

Option 4 ID : 264330618469

Status : Not Attempted and
Marked For Review

Chosen Option : --

Q.33 The perimeter of a sector of a circle is 24 cm and the radius is 3 cm. Calculate the area (in cm^2) of the sector.

Ans

✗ 1. 24

✗ 2. 33

✓ 3. 27

✗ 4. 30

Question ID : 264330163482

Option 1 ID : 264330641187

Option 2 ID : 264330641190

Option 3 ID : 264330641188

Option 4 ID : 264330641189

Status : Not Attempted and
Marked For Review

Chosen Option : --

Q.34 Study the given table and answer the question that follows.
The table shows the production of five types of cars P, Q, R, S and T by a company from the year 1989 to 1994.

Type of Car	1989	1990	1991	1992	1993	1994	Total
P	8	20	16	17	21	6	88
Q	16	10	14	12	12	14	78
R	21	17	16	15	13	8	90
S	4	6	10	16	20	31	87
T	25	18	19	30	14	27	133
Total	74	71	75	90	80	86	476

During the period 1989-94, which type of car featured a continuous decrease in production?

- Ans
- ☒ 1. S
 - ☒ 2. Q
 - ☒ 3. R
 - ☒ 4. T

Question ID : 264330165466

Option 1 ID : 264330648945

Option 2 ID : 264330648943

Option 3 ID : 264330648944

Option 4 ID : 264330648946

Status : Not Attempted and Marked For Review

Chosen Option : --

Q.35 Find the value of $\frac{\cos 65^\circ}{\sin 25^\circ} + \frac{5 \sin 19^\circ}{\cos 71^\circ} - \frac{3 \cos 28^\circ}{\sin 62^\circ}$.

- Ans
- ☒ 1. 2
 - ☒ 2. 0
 - ☒ 3. 1
 - ☒ 4. 3

Question ID : 264330158292

Option 1 ID : 264330620529

Option 2 ID : 264330620527

Option 3 ID : 264330620528

Option 4 ID : 264330620530

Status : Not Attempted and Marked For Review

Chosen Option : --

Q.36 Swastik saves 20% of his income while spends the remaining amount on food, rent, education and shopping. 15% of the income is spent on food, while ₹12,800 is spent on rent, ₹32,000 on education and ₹7,200 on shopping. The amount spent on shopping is 11.25% of the total expenditure. How much money (in ₹) is spent on food?

- Ans
- ☒ 1. 9600
 - ☒ 2. 10800
 - ☒ 3. 12000
 - ☒ 4. 15000

Question ID : 264330103315

Option 1 ID : 264330405567

Option 2 ID : 264330405568

Option 3 ID : 264330405565

Option 4 ID : 264330405566

Status : Not Attempted and Marked For Review

Chosen Option : --

Q.37 Simplify the given expression.

$$\frac{a^2 - b^2 - 2bc - c^2}{a^2 + b^2 + 2ab - c^2}$$

Ans

✗ 1. $\frac{a + b + c}{a - b - c}$

✓ 2. $\frac{a - b - c}{a + b - c}$

✗ 3. $\frac{a + b - c}{a - b - c}$

✗ 4. $\frac{a - b + c}{a + b - c}$

Question ID : 264330157767

Option 1 ID : 264330618430

Option 2 ID : 264330618429

Option 3 ID : 264330618428

Option 4 ID : 264330618427

Status : Not Attempted and
Marked For Review

Chosen Option : --

Q.38 If the marked price is 75% more than the cost price and a discount of 40% is allowed on the marked price, then the percentage profit is:

Ans

✗ 1. 6%

✗ 2. 7%

✗ 3. 8%

✓ 4. 5%

Question ID : 264330104505

Option 1 ID : 264330410324

Option 2 ID : 264330410321

Option 3 ID : 264330410322

Option 4 ID : 264330410323

Status : Not Attempted and
Marked For Review

Chosen Option : --

Q.39 In what ratio must a shopkeeper mix two types of rice worth ₹55 per kg and ₹70 per kg, so that the average cost of the mixture is ₹65 per kg?

Ans

✓ 1. 1 : 2

✗ 2. 2 : 3

✗ 3. 3 : 2

✗ 4. 1 : 3

Question ID : 264330105977

Option 1 ID : 264330416212

Option 2 ID : 264330416209

Option 3 ID : 264330416210

Option 4 ID : 264330416211

Status : Not Attempted and
Marked For Review

Chosen Option : --

Q.40 What is the value of the given expression?

$$\frac{1}{12} + \frac{1}{16} + \frac{1}{8}$$

Ans

✓ 1. $\frac{13}{48}$

✗ 2. $\frac{10}{72}$

✗ 3. $\frac{3}{48}$

✗ 4. $\frac{13}{18}$

Question ID : 26433063280

Option 1 ID : 264330247773

Option 2 ID : 264330247775

Option 3 ID : 264330247772

Option 4 ID : 264330247774

Status : Answered

Chosen Option : 1

Q.41 For a triangle ABC, D and E are two points on AB and AC such that $AD = \frac{1}{6} AB$, $AE = \frac{1}{6} AC$. If $BC = 22$ cm, then DE is _____. (Consider up to two decimals)

Ans

✗ 1. 1.33 cm

✗ 2. 1.67 cm

✓ 3. 3.67 cm

✗ 4. 3.33 cm

Question ID : 264330145114

Option 1 ID : 264330568714

Option 2 ID : 264330568711

Option 3 ID : 264330568713

Option 4 ID : 264330568712

Status : Not Attempted and Marked For Review

Chosen Option : --

Q.42 Reema runs $\frac{5}{4}$ times as fast as Rekha. In view of this Reema allows Rekha a lead of 50 metres to Rekha in a friendly race competition. What is the distance from the starting point where both Reema and Rekha meet?

Ans

✓ 1. 250 m

✗ 2. 225 m

✗ 3. 200 m

✗ 4. 240 m

Question ID : 264330145027

Option 1 ID : 264330568363

Option 2 ID : 264330568364

Option 3 ID : 264330568365

Option 4 ID : 264330568366

Status : Not Attempted and Marked For Review

Chosen Option : --

Q.43 The given table shows marks obtained by four students in four subjects.

Subjects Student	Maths (100)	English (100)	Science (100)	Hindi (100)
A	75	80	75	85
B	80	70	70	80
C	70	85	85	75
D	85	75	80	70

The average percentage of marks obtained by all students in Hindi is:

- Ans
- ☐ 1. 77.0%
 - ☐ 2. 77.6%
 - ☐ 3. 77.8%
 - ☒ 4. 77.5%

Question ID : 264330165488

Option 1 ID : 264330649032

Option 2 ID : 264330649031

Option 3 ID : 264330649034

Option 4 ID : 264330649033

Status : Not Attempted and
Marked For Review

Chosen Option : --

Q.44 If $\cot \theta = \frac{4}{3}$, $0 < \theta < \frac{\pi}{2}$, and $5p \cos^2 \theta \sin \theta = \cot^2 \theta$, then the value of p is:

- Ans
- ☐ 1. $\frac{7}{27}$
 - ☐ 2. $\frac{125}{27}$
 - ☐ 3. $\frac{5}{27}$
 - ☒ 4. $\frac{25}{27}$

Question ID : 264330145122

Option 1 ID : 264330568746

Option 2 ID : 264330568745

Option 3 ID : 264330568744

Option 4 ID : 264330568743

Status : Answered

Chosen Option : 4

Q.45 Train 'A' requires 15 seconds to cross train 'B' of length 300 m moving in the opposite direction at a speed of 36 km/h. Further, train 'A' requires 30 seconds to cross a 500 m long stationary train 'C'. Find the length (in m) of train 'A'.

Ans ☒ 1. 200

☐ 2. 300

☐ 3. 250

☐ 4. 275

Question ID : 264330103990

Option 1 ID : 264330408264

Option 2 ID : 264330408261

Option 3 ID : 264330408263

Option 4 ID : 264330408262

Status : Not Attempted and
Marked For Review

Chosen Option : --

Q.46 If the difference between the selling prices of an article at profits of 10% and 7% is ₹6, then the cost price (in ₹) of the article is:

Ans ☐ 1. 175

☐ 2. 150

☒ 3. 200

☐ 4. 100

Question ID : 264330102344

Option 1 ID : 264330401843

Option 2 ID : 264330401842

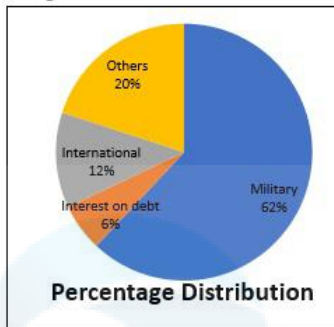
Option 3 ID : 264330401844

Option 4 ID : 264330401841

Status : Not Attempted and
Marked For Review

Chosen Option : --

- Q.47 Study the given pie-chart and answer the question that follows.
The pie-chart shows the National Budget Expenditure in the year 2019.



If ₹850 billion were spent in year 2019 for interest on debt and military, then what would have been the total expenditure for that year (in ₹ billion)?

- Ans
- ☒ 1. 1,700
 - ☒ 2. 1,300
 - ☒ 3. 1,250
 - ☒ 4. 1,450

Question ID : 264330158281

Option 1 ID : 264330620483

Option 2 ID : 264330620485

Option 3 ID : 264330620486

Option 4 ID : 264330620484

Status : Not Attempted and
Marked For Review

Chosen Option : --

- Q.48 John can do a piece of work alone in 20 days, while Ravi can do the same piece of work alone in 28 days. In how many days can the duo complete the same work if they work together?

- Ans
- ☒ 1. $11\frac{1}{3}$
 - ☒ 2. $12\frac{2}{3}$
 - ☒ 3. $11\frac{2}{3}$
 - ☒ 4. $12\frac{1}{3}$

Question ID : 264330103284

Option 1 ID : 264330405442

Option 2 ID : 264330405444

Option 3 ID : 264330405441

Option 4 ID : 264330405443

Status : Not Attempted and
Marked For Review

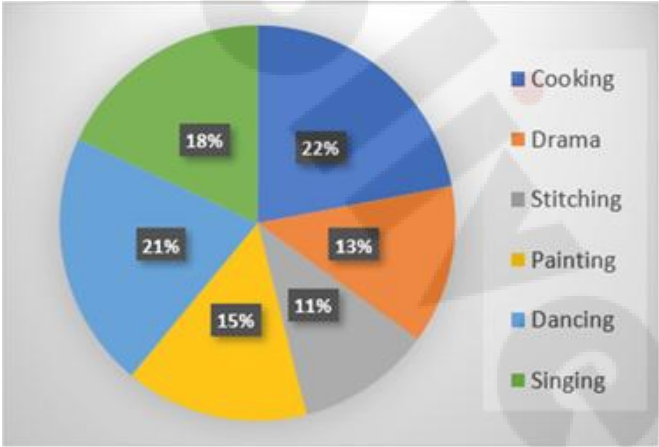
Chosen Option : --

Q.49 At a courier shop, the weights of 8 parcels were found to be 1.5 kg, 1.25 kg, 1.35 kg, 750 gm, 950 gm, 0.7 kg, 0.4 kg, and 0.5 kg. Find their average weight.

- Ans
- ☒ 1. 875gm
 - ☒ 2. 900gm
 - ☒ 3. 925gm
 - ☒ 4. 700gm

Question ID : 264330109236
Option 1 ID : 264330429221
Option 2 ID : 264330429223
Option 3 ID : 264330429224
Option 4 ID : 264330429222
Status : Answered
Chosen Option : 3

Q.50 Study the given pie-chart and answer the question that follows.
The pie-chart shows the percentage of 3600 students enrolled in different hobby classes in a school.



The number of students enrolled in Painting classes is approximately what percentage of those enrolled in Singing classes?

- Ans
- ☒ 1. 108%
 - ☒ 2. 83%
 - ☒ 3. 98%
 - ☒ 4. 78%

Question ID : 264330157735
Option 1 ID : 264330618302
Option 2 ID : 264330618300
Option 3 ID : 264330618301
Option 4 ID : 264330618299
Status : Answered
Chosen Option : 1

Q.1 Select the option that can be used as a one-word substitute for the given group of words.

Study of science of insects

- Ans ☒ 1. Entomology
☒ 2. Anthropology
☒ 3. Microbiology
☒ 4. Ecology

Question ID : 26433088991
Option 1 ID : 264330349501
Option 2 ID : 264330349502
Option 3 ID : 264330349504
Option 4 ID : 264330349503
Status : Answered
Chosen Option : 1

Q.2 Select the most appropriate ANTONYM of the given word.

Apathy

- Ans ☒ 1. Interruption
☒ 2. Ignorance
☒ 3. Interest
☒ 4. Sincerity

Question ID : 26433099134
Option 1 ID : 264330389149
Option 2 ID : 264330389152
Option 3 ID : 264330389150
Option 4 ID : 264330389151
Status : Not Attempted and Marked For Review
Chosen Option : --

Q.3 Select the option that can be used as a one-word substitute for the given group of words.

One who settles in another country

- Ans ☒ 1. Resident
☒ 2. Immigrant
☒ 3. Traveller
☒ 4. Refugee

Question ID : 26433088532
Option 1 ID : 264330347704
Option 2 ID : 264330347701
Option 3 ID : 264330347703
Option 4 ID : 264330347702
Status : Answered
Chosen Option : 2

Q.4 Select the most appropriate option that can substitute the underlined segment in the given sentence. If there is no need to substitute it, select 'No substitution required'.
The Taj Mahal is one of the much popular seven wonders of the world.

- Ans** ☒ 1. No substitution required
☒ 2. more
☒ 3. much more
☒ 4. most

Question ID : 26433070768
Option 1 ID : 264330277531
Option 2 ID : 264330277529
Option 3 ID : 264330277528
Option 4 ID : 264330277530
Status : Answered
Chosen Option : 4

Q.5 Select the INCORRECTLY spelt word from the given sentence.
Gandhiji considared untouchability to be one of India's major social ills.

- Ans** ☒ 1. social
☒ 2. major
☒ 3. considared
☒ 4. untouchability

Question ID : 264330164526
Option 1 ID : 264330645298
Option 2 ID : 264330645297
Option 3 ID : 264330645295
Option 4 ID : 264330645296
Status : Answered
Chosen Option : 3

Q.6 Select the most appropriate meaning of the given idiom.

Crack someone up

- Ans** ☒ 1. To criticise someone
☒ 2. To force someone to commit a mistake
☒ 3. To make someone angry
☒ 4. To make someone laugh

Question ID : 264330163404
Option 1 ID : 264330640896
Option 2 ID : 264330640898
Option 3 ID : 264330640895
Option 4 ID : 264330640897
Status : Answered
Chosen Option : 1

Q.7 Select the most appropriate synonym of the given word.
Captivate

- Ans ☒ 1. Study
☒ 2. Allure
☒ 3. Envelope
☒ 4. Arrest

Question ID : 264330102432
Option 1 ID : 264330402176
Option 2 ID : 264330402174
Option 3 ID : 264330402175
Option 4 ID : 264330402173
Status : Not Attempted and Marked For Review
Chosen Option : --

Q.8 Select the option that can be used as a one-word substitute for the given group of words.

The capacity for being useful for some purpose.

- Ans ☒ 1. Gain
☒ 2. Utility
☒ 3. Desirability
☒ 4. Aid

Question ID : 26433090451
Option 1 ID : 264330355265
Option 2 ID : 264330355266
Option 3 ID : 264330355268
Option 4 ID : 264330355267
Status : Answered
Chosen Option : 2

Q.9 Select the most appropriate ANTONYM of the given word.

Rejoinder

- Ans ☒ 1. Expedite
☒ 2. Reply
☒ 3. Ordinary
☒ 4. Request

Question ID : 264330163379
Option 1 ID : 264330640806
Option 2 ID : 264330640803
Option 3 ID : 264330640804
Option 4 ID : 264330640805
Status : Not Attempted and Marked For Review
Chosen Option : --

Q.10 Select the sentence that has a spelling error.

- A- The art of living is learnt easily by those who are positive and optimistic.
B- We can learn a lot about the art of living by having a peep into the lives of great men.
C- The daily routines of these great men dissiminate that they are different.
D- Their unique lifestyles help us learn certain habits and practices that they followed.

- Ans ☒ 1. The daily routines of these great men dissiminate that they are different.
☐ 2. Their unique lifestyles help us learn certain habits and practices that they followed.
☐ 3. We can learn a lot about the art of living by having a peep into the lives of great men.
☐ 4. The art of living is learnt easily by those who are positive and optimistic.

Question ID : 264330141561

Option 1 ID : 264330554581

Option 2 ID : 264330554582

Option 3 ID : 264330554580

Option 4 ID : 264330554579

Status : Answered

Chosen Option : 2

Q.11 Select the correct idiom to replace the underlined segment in the given sentence.

We should ask Emily to join our team. She is as keen as butter.

- Ans ☐ 1. as keen as a bee
☒ 2. as keen as mustard
☐ 3. as keen as salt
☐ 4. as keen as sugar

Question ID : 26433092313

Option 1 ID : 264330362550

Option 2 ID : 264330362551

Option 3 ID : 264330362549

Option 4 ID : 264330362552

Status : Answered

Chosen Option : 1

Q.12 Choose the correct spelling of the underlined word in the given sentence.
He has won the medal for the twelfth time.

- Ans ☐ 1. Twellth
☐ 2. Twwelfth
☒ 3. Twelfth
☐ 4. Twelth

Question ID : 264330117377

Option 1 ID : 264330461549

Option 2 ID : 264330461551

Option 3 ID : 264330461550

Option 4 ID : 264330461552

Status : Answered

Chosen Option : 1

Q.13 Select the most appropriate meaning of the given idiom.

What a small world!

- Ans ☒ 1. The world is great.
☒ 2. What a beautiful place!
☒ 3. The world is a village.
☒ 4. What a coincidence!

Question ID : 26433099940
Option 1 ID : 264330392334
Option 2 ID : 264330392336
Option 3 ID : 264330392333
Option 4 ID : 264330392335

Status : Answered

Chosen Option : 4

Q.14 Select the most appropriate option that can substitute the underlined segment in the given sentence.

Payal's father was seen desperately searching for the medicine that can counteract the effect of a venomous snakebite in Parul's left hand.

- Ans ☒ 1. antiseptic
☒ 2. anti-serum
☒ 3. remedy
☒ 4. antidote

Question ID : 26433070594
Option 1 ID : 264330276840
Option 2 ID : 264330276842
Option 3 ID : 264330276843
Option 4 ID : 264330276841

Status : Answered

Chosen Option : 4

Q.15 Select the most appropriate ANTONYM of the given word.
Asset

- Ans ☒ 1. Mole
☒ 2. Liability
☒ 3. Wealth
☒ 4. Refuge

Question ID : 264330167909
Option 1 ID : 264330658555
Option 2 ID : 264330658558
Option 3 ID : 264330658557
Option 4 ID : 264330658556

Status : Answered

Chosen Option : 2

Q.16 Select the INCORRECTLY spelt word.

- Ans ☒ 1. Merriment
☒ 2. Yearn
☒ 3. Zenith
☒ 4. Miniture

Question ID : 26433091838
Option 1 ID : 264330360690
Option 2 ID : 264330360692
Option 3 ID : 264330360691
Option 4 ID : 264330360689
Status : Answered
Chosen Option : 4

Q.17 Select the most appropriate ANTONYM of the given word.
Placid

- Ans ☒ 1. Turbulent
☒ 2. Pensive
☒ 3. Pristine
☒ 4. Destined

Question ID : 26433097020
Option 1 ID : 264330380815
Option 2 ID : 264330380816
Option 3 ID : 264330380813
Option 4 ID : 264330380814
Status : Not Attempted and Marked For Review
Chosen Option : --

Q.18 Choose the most suitable idiom for the given situation.
Ravi has a strong desire to be in college hockey team this year and he is working hard to gain such skills to fulfill his goal of life. He has clearly made up his mind to achieve his target.

- Ans ☒ 1. To rise to the occasion
☒ 2. To make the cut
☒ 3. Set sights on
☒ 4. To move the goal posts

Question ID : 264330137462
Option 1 ID : 264330538474
Option 2 ID : 264330538472
Option 3 ID : 264330538473
Option 4 ID : 264330538471
Status : Not Attempted and Marked For Review
Chosen Option : --

Q.19 Select the INCORRECTLY spelt word.

- Ans ☒ 1. Bread
☒ 2. Pasta
☒ 3. Noodle
☒ 4. Pitzza

Question ID : 26433089012
Option 1 ID : 264330349588
Option 2 ID : 264330349586
Option 3 ID : 264330349585
Option 4 ID : 264330349587
Status : Answered
Chosen Option : 4

Q.20 Identify the sentence that correctly uses the indefinite article.

- Ans ☒ 1. There are three cars parked outside: a Mercedes, an Jaguar and a Fiat.
☒ 2. There are three cars parked outside: an Mercedes, a Jaguar and a Fiat.
☒ 3. There are three cars parked outside: a Mercedes, a Jaguar and a Fiat.
☒ 4. There are three cars parked outside: a Mercedes, an Jaguar and an Fiat.

Question ID : 26433059561
Option 1 ID : 264330233094
Option 2 ID : 264330233093
Option 3 ID : 264330233092
Option 4 ID : 264330233095
Status : Answered
Chosen Option : 3

Q.21 You are preparing a speech for an upcoming function. Select a synonym for the highlighted word to make it better.

Effective public transportation networks may greatly alleviate traffic congestion and enhance inhabitants' quality of life in general.

- Ans ☒ 1. Amplification
☒ 2. Diversion
☒ 3. Gridlock
☒ 4. Laxity

Question ID : 264330121904
Option 1 ID : 264330477774
Option 2 ID : 264330477772
Option 3 ID : 264330477771
Option 4 ID : 264330477773
Status : Answered
Chosen Option : 3

Q.22 Select the option that can be used as a one-word substitute for the given group of words.

Happening repeatedly

- Ans ☒ 1. Recuperate
☒ 2. Recurrent
☒ 3. Rapport
☒ 4. Regression

Question ID : 26433073674
Option 1 ID : 264330288837
Option 2 ID : 264330288836
Option 3 ID : 264330288839
Option 4 ID : 264330288838
Status : Answered
Chosen Option : 2

Q.23 Select the correct idiom that can substitute the italicised group of words in the given sentence.

He really stinks and *smells foul* after a hard session at the gym.

- Ans ☒ 1. an old flame
☒ 2. an iron will
☒ 3. pen and ink
☒ 4. lame excuse

Question ID : 26433094782
Option 1 ID : 264330371953
Option 2 ID : 264330371955
Option 3 ID : 264330371956
Option 4 ID : 264330371954
Status : Not Attempted and Marked For Review
Chosen Option : --

Q.24 The following sentence has been divided into parts. One of them may contain an error. Select the part that contains the error from the given options. If you don't find any error, mark 'No error' as your answer.

I wanted to buy a candle holder, / but the store didn't have one. / So, I got a cake.

- Ans ☒ 1. No error
☒ 2. but the store didn't have one
☒ 3. I wanted to buy a candle holder
☒ 4. So, I got a cake

Question ID : 26433059551
Option 1 ID : 264330233055
Option 2 ID : 264330233053
Option 3 ID : 264330233052
Option 4 ID : 264330233054
Status : Answered
Chosen Option : 2

Q.25 Select the most appropriate idiom to fill in the blank.
All my efforts went in vain. The project on which I was working for the last two months has failed and we are _____.

- Ans
- ☒ 1. all in the seventh heaven
 - ☒ 2. back to square one
 - ☒ 3. on the fly
 - ☒ 4. around the bend

Question ID : 264330134221
Option 1 ID : 264330525880
Option 2 ID : 264330525879
Option 3 ID : 264330525881
Option 4 ID : 264330525882
Status : Answered
Chosen Option : 2

Q.26 Select the most appropriate idiom to fill in the blank.
Choosing not to pursue a degree in computer engineering was _____, as the market for them is extremely limited nowadays.

- Ans
- ☒ 1. airy fairy
 - ☒ 2. a cut above
 - ☒ 3. an elevator pitch
 - ☒ 4. a blessing in disguise

Question ID : 264330134219
Option 1 ID : 264330525871
Option 2 ID : 264330525873
Option 3 ID : 264330525874
Option 4 ID : 264330525872
Status : Not Attempted and Marked For Review
Chosen Option : --

Q.27 Select the option that can be used as a one-word substitute for the given group of words.

A person who believes that God does not exist

- Ans
- ☒ 1. Atheist
 - ☒ 2. Fanatic
 - ☒ 3. Epicurean
 - ☒ 4. Hedonistic

Question ID : 26433088195
Option 1 ID : 264330346375
Option 2 ID : 264330346374
Option 3 ID : 264330346376
Option 4 ID : 264330346373
Status : Answered
Chosen Option : 1

Q.28 Select the most appropriate ANTONYM of the word 'discordant' in the given sentence and choose the correct option.

The sweet melodious symphony of the piano filled the room, transporting the listeners to a world of beauty and emotion.

- Ans ☒ 1. Filled
☒ 2. Melodious
☒ 3. Transporting
☒ 4. Emotion

Question ID : 264330163538
Option 1 ID : 264330641408
Option 2 ID : 264330641407
Option 3 ID : 264330641409
Option 4 ID : 264330641410
Status : Not Attempted and Marked For Review
Chosen Option : --

Q.29 Select the correct option to substitute the underlined segment in the given sentence. If no substitution is required, select 'No substitution'.

He is faster than smarter.

- Ans ☒ 1. more fast than smart
☒ 2. fast than smart
☒ 3. faster than being smart
☒ 4. No substitution

Question ID : 26433090823
Option 1 ID : 264330356713
Option 2 ID : 264330356715
Option 3 ID : 264330356714
Option 4 ID : 264330356716
Status : Not Attempted and Marked For Review
Chosen Option : --

Q.30 Parts of the following sentence have been given as options. One of them may contain an error. Select the part that contains the error from the given options. If you don't find any error, mark 'No error' as your answer.

You arrived two days ago. By the time you leave, you will have spent nine days here.

- Ans ☒ 1. You arrived two days ago
☒ 2. No error
☒ 3. By the time you leave
☒ 4. you will have spent nine days here

Question ID : 26433090496
Option 1 ID : 264330355433
Option 2 ID : 264330355436
Option 3 ID : 264330355434
Option 4 ID : 264330355435
Status : Not Attempted and Marked For Review
Chosen Option : --

Q.31 Select the option that can be used as a one-word substitute for the given group of words.

The study of the human mind

- Ans ☒ 1. Psychology
☒ 2. Microbiology
☒ 3. Epidemiology
☒ 4. Anthropology

Question ID : 26433088754
Option 1 ID : 264330348572
Option 2 ID : 264330348571
Option 3 ID : 264330348570
Option 4 ID : 264330348569
Status : Answered
Chosen Option : 1

Q.32 Select the most appropriate option to substitute the underlined segment in the given sentence.

Any sort of unfair conduct is not tolerated in international sports tournaments as it can completely ruin an athlete's career.

- Ans ☒ 1. straw in the eye
☒ 2. hand in the mud
☒ 3. foul play
☒ 4. red handed

Question ID : 26433092923
Option 1 ID : 264330364961
Option 2 ID : 264330364963
Option 3 ID : 264330364964
Option 4 ID : 264330364962
Status : Answered
Chosen Option : 3

Q.33 Select the most appropriate ANTONYM of the given word.
Denounce

- Ans ☒ 1. Praise
☒ 2. Relieve
☒ 3. Criticise
☒ 4. Dainty

Question ID : 264330165246
Option 1 ID : 264330648084
Option 2 ID : 264330648085
Option 3 ID : 264330648083
Option 4 ID : 264330648086
Status : Not Attempted and Marked For Review
Chosen Option : --

Q.34 Select the most appropriate ANTONYM of the given word.

Leniency

- Ans ☒ 1. Penalty
☒ 2. Favour
☒ 3. Sternness
☒ 4. Discard

Question ID : 264330163374

Option 1 ID : 264330640786

Option 2 ID : 264330640783

Option 3 ID : 264330640785

Option 4 ID : 264330640784

Status : Not Attempted and
Marked For Review

Chosen Option : --

Q.35 Select the most appropriate synonym of the word 'viable' in the given sentence and choose the correct option.

The engineer's design was optimised for efficiency and scalability, with a focus on sustainability.

- Ans ☒ 1. Efficiency
☒ 2. Optimised
☒ 3. Scalability
☒ 4. Sustainability

Question ID : 264330163534

Option 1 ID : 264330641392

Option 2 ID : 264330641391

Option 3 ID : 264330641393

Option 4 ID : 264330641394

Status : Answered

Chosen Option : 2

Q.36 The following sentence has been split into four segments. Identify the segment that contains a grammatical error.

A Prime Minister of India / will address / the nation today / on the occasion of Independence Day.

- Ans ☒ 1. A Prime Minister of India
☒ 2. the nation today
☒ 3. on the occasion of Independence Day
☒ 4. will address

Question ID : 264330120604

Option 1 ID : 264330472655

Option 2 ID : 264330472657

Option 3 ID : 264330472658

Option 4 ID : 264330472656

Status : Answered

Chosen Option : 1

Q.37 Select the most appropriate idiom to fill in the blank.

I think we should _____ before buying this car.

- Ans ☒ 1. eat like a horse
☒ 2. hold our horses
☒ 3. stop to change horses
☒ 4. get off our high horse

Question ID : 264330163337
Option 1 ID : 264330640647
Option 2 ID : 264330640650
Option 3 ID : 264330640648
Option 4 ID : 264330640649
Status : Answered
Chosen Option : 2

Q.38 Select the correct idiom to substitute the underlined word segment in the following sentence.
She trusted her husband but he stabbed her in the neck when he usurped her inheritance.

- Ans ☒ 1. stabbed her in the back
☒ 2. stabbed her prospects
☒ 3. stabbed her with a fork
☒ 4. snapped her in the neck

Question ID : 264330101448
Option 1 ID : 264330398303
Option 2 ID : 264330398302
Option 3 ID : 264330398301
Option 4 ID : 264330398304
Status : Answered
Chosen Option : 2

Q.39 Select the option that can be used as a one-word substitute for the given group of words.
A keeper or custodian of a museum or other collection

- Ans ☒ 1. Cartographer
☒ 2. Calligrapher
☒ 3. Curator
☒ 4. Chauffeur

Question ID : 264330164300
Option 1 ID : 264330644415
Option 2 ID : 264330644418
Option 3 ID : 264330644417
Option 4 ID : 264330644416
Status : Answered
Chosen Option : 3

Q.40 Parts of the following sentence have been given as options. Select the option that contains an error.
Raman ate the cake and exclaimed that it tasted sweetly.

- Ans
- ☒ 1. the cake
 - ☒ 2. and exclaimed that
 - ☒ 3. it tasted sweetly
 - ☒ 4. Raman ate

Question ID : 264330134121
Option 1 ID : 264330525508
Option 2 ID : 264330525509
Option 3 ID : 264330525510
Option 4 ID : 264330525507
Status : Answered
Chosen Option : 3

Comprehension:

In the following passage, some words have been deleted. Read the passage carefully and select the most appropriate option to fill in each blank.

South Korea is the most cosmetically (1)_____ country on Earth. Beauty editors estimate that it is because of the government's heavy investment (2)_____ industry. It is ahead of its competitors, and its citizens (3)_____ twice as much on skincare products as consumers in the United States, the UK, and France. Korean shoppers are (4)_____ the world's most discerning. Eight out of 10 Korean women in their 20s and 30s use an app that (5)_____ like a cosmetics-specific, to debate the merits of various common ingredients.

SubQuestion No : 41

Q.41 Select the most appropriate option to fill in blank number 1.

- Ans
- ☒ 1. ancient
 - ☒ 2. primitive
 - ☒ 3. advanced
 - ☒ 4. early

Question ID : 264330164225
Option 1 ID : 264330644135
Option 2 ID : 264330644137
Option 3 ID : 264330644136
Option 4 ID : 264330644138
Status : Answered
Chosen Option : 3

Comprehension:

In the following passage, some words have been deleted. Read the passage carefully and select the most appropriate option to fill in each blank.

South Korea is the most cosmetically (1)_____ country on Earth. Beauty editors estimate that it is because of the government's heavy investment (2)_____ industry. It is ahead of its competitors, and its citizens (3)_____ twice as much on skincare products as consumers in the United States, the UK, and France. Korean shoppers are (4)_____ the world's most discerning. Eight out of 10 Korean women in their 20s and 30s use an app that (5)_____ like a cosmetics-specific, to debate the merits of various common ingredients.

SubQuestion No : 42

Q.42 Select the most appropriate option to fill in blank number 2.

- Ans
- ☒ 1. of the
 - ☒ 2. by the
 - ☒ 3. in the
 - ☒ 4. from the

Question ID : 264330164226
Option 1 ID : 264330644139
Option 2 ID : 264330644140
Option 3 ID : 264330644141
Option 4 ID : 264330644142
Status : Answered
Chosen Option : 3

Comprehension:

In the following passage, some words have been deleted. Read the passage carefully and select the most appropriate option to fill in each blank.

South Korea is the most cosmetically (1)_____ country on Earth. Beauty editors estimate that it is because of the government's heavy investment (2)_____ industry. It is ahead of its competitors, and its citizens (3)_____ twice as much on skincare products as consumers in the United States, the UK, and France. Korean shoppers are (4)_____ the world's most discerning. Eight out of 10 Korean women in their 20s and 30s use an app that (5)_____ like a cosmetics-specific, to debate the merits of various common ingredients.

SubQuestion No : 43

Q.43 Select the most appropriate option to fill in blank number 3.

- Ans
- ☒ 1. spend
 - ☒ 2. cherish
 - ☒ 3. comply
 - ☒ 4. propagate

Question ID : 264330164227
Option 1 ID : 264330644146
Option 2 ID : 264330644144
Option 3 ID : 264330644143
Option 4 ID : 264330644145
Status : Answered
Chosen Option : 1

Comprehension:

In the following passage, some words have been deleted. Read the passage carefully and select the most appropriate option to fill in each blank.

South Korea is the most cosmetically (1)_____ country on Earth. Beauty editors estimate that it is because of the government's heavy investment (2)_____ industry. It is ahead of its competitors, and its citizens (3)_____ twice as much on skincare products as consumers in the United States, the UK, and France. Korean shoppers are (4)_____ the world's most discerning. Eight out of 10 Korean women in their 20s and 30s use an app that (5)_____ like a cosmetics-specific, to debate the merits of various common ingredients.

SubQuestion No : 44

Q.44 Select the most appropriate option to fill in blank number 4.

- Ans
- ✓ 1. perhaps
 - ✗ 2. although
 - ✗ 3. maybe
 - ✗ 4. though

Question ID : 264330164228
Option 1 ID : 264330644147
Option 2 ID : 264330644148
Option 3 ID : 264330644150
Option 4 ID : 264330644149
Status : Answered
Chosen Option : 3

Comprehension:

In the following passage, some words have been deleted. Read the passage carefully and select the most appropriate option to fill in each blank.

South Korea is the most cosmetically (1)_____ country on Earth. Beauty editors estimate that it is because of the government's heavy investment (2)_____ industry. It is ahead of its competitors, and its citizens (3)_____ twice as much on skincare products as consumers in the United States, the UK, and France. Korean shoppers are (4)_____ the world's most discerning. Eight out of 10 Korean women in their 20s and 30s use an app that (5)_____ like a cosmetics-specific, to debate the merits of various common ingredients.

SubQuestion No : 45

Q.45 Select the most appropriate option to fill in blank number 5.

- Ans
- ✗ 1. dissolves
 - ✗ 2. stops
 - ✗ 3. malfunctions
 - ✓ 4. functions

Question ID : 264330164229
Option 1 ID : 264330644153
Option 2 ID : 264330644151
Option 3 ID : 264330644152
Option 4 ID : 264330644154
Status : Answered
Chosen Option : 4

Comprehension:

Read the given passage carefully and answer the questions that follow.

Throughout history, the intricacies of the human mind have been the subject of fascination and inquiry. From ancient philosophers to modern-day neuroscientists, the workings of the brain have been studied and analysed in an attempt to unravel its mysteries. However, despite centuries of research, much remains unknown about the complexities of human cognition and consciousness.

One of the most fascinating aspects of the human mind is its ability to create and imagine. The human mind has the capacity to conceptualise and bring into being ideas that were previously unknown or unimaginable, from artistic expression to scientific discovery. The process of creativity has captured the attention of scholars and laypeople alike and is both enigmatic and awe-inspiring.

There have been many theories proposed to explain the process of creativity. Some suggest that it is a purely subconscious process, while others argue that creativity is a result of conscious effort and intentional problem-solving. Still others suggest that creativity arises from a combination of conscious and subconscious processes.

Despite the ongoing debate over the nature of creativity, one thing is clear: it is a multifaceted and complex phenomenon. Creativity can manifest in a wide range of human activities, from the creation of art and literature to the development of scientific theories and inventions. It can occur in both individual and collective contexts and can be driven by a variety of factors such as curiosity, passion, or the desire for recognition.

Creativity also has the potential to bring about positive change in the world. Throughout history, creative individuals and groups have used their talents to address social, political, and environmental challenges, often inspiring others to take action and make a difference. From the abolitionist movement to the civil rights movement to the environmental movement, creativity has played a crucial role in promoting social justice and positive change.

Despite the many benefits of creativity, it is not without its challenges. The process of creative expression can be fraught with obstacles, from self-doubt and insecurity to external pressures and constraints. Moreover, not all creative ideas are successful or well-received, and many artists and innovators face rejection and criticism as they seek to bring their ideas to fruition.

Despite these challenges, however, the human drive to create and imagine persists.

Individuals and groups continue to harness the power of creativity to make a difference in the world. From the humblest amateur artist to the most celebrated innovator, the human capacity for creativity remains one of our greatest strengths and sources of inspiration.

SubQuestion No : 46

Q.46 Select an appropriate title for the passage.

- Ans**
- ☒ 1. The Power of Creativity
 - ☐ 2. The Complexities of Human Cognition
 - ☐ 3. The History of the Human Mind
 - ☐ 4. The Role of the Human Mind in Promoting Positive Change

Question ID : 264330165133

Option 1 ID : 264330647640

Option 2 ID : 264330647642

Option 3 ID : 264330647639

Option 4 ID : 264330647641

Status : Answered

Chosen Option : 1

Comprehension:

Read the given passage carefully and answer the questions that follow.

Throughout history, the intricacies of the human mind have been the subject of fascination and inquiry. From ancient philosophers to modern-day neuroscientists, the workings of the brain have been studied and analysed in an attempt to unravel its mysteries. However, despite centuries of research, much remains unknown about the complexities of human cognition and consciousness.

One of the most fascinating aspects of the human mind is its ability to create and imagine. The human mind has the capacity to conceptualise and bring into being ideas that were previously unknown or unimaginable, from artistic expression to scientific discovery. The process of creativity has captured the attention of scholars and laypeople alike and is both enigmatic and awe-inspiring.

There have been many theories proposed to explain the process of creativity. Some suggest that it is a purely subconscious process, while others argue that creativity is a result of conscious effort and intentional problem-solving. Still others suggest that creativity arises from a combination of conscious and subconscious processes.

Despite the ongoing debate over the nature of creativity, one thing is clear: it is a multifaceted and complex phenomenon. Creativity can manifest in a wide range of human activities, from the creation of art and literature to the development of scientific theories and inventions. It can occur in both individual and collective contexts and can be driven by a variety of factors such as curiosity, passion, or the desire for recognition.

Creativity also has the potential to bring about positive change in the world. Throughout history, creative individuals and groups have used their talents to address social, political, and environmental challenges, often inspiring others to take action and make a difference. From the abolitionist movement to the civil rights movement to the environmental movement, creativity has played a crucial role in promoting social justice and positive change.

Despite the many benefits of creativity, it is not without its challenges. The process of creative expression can be fraught with obstacles, from self-doubt and insecurity to external pressures and constraints. Moreover, not all creative ideas are successful or well-received, and many artists and innovators face rejection and criticism as they seek to bring their ideas to fruition.

Despite these challenges, however, the human drive to create and imagine persists.

Individuals and groups continue to harness the power of creativity to make a difference in the world. From the humblest amateur artist to the most celebrated innovator, the human capacity for creativity remains one of our greatest strengths and sources of inspiration.

SubQuestion No : 47

Q.47 What is the main focus of the passage?

- Ans
- ☒ 1. The complexities and challenges of cognitive processes.
 - ☒ 2. The mysteries of the human mind.
 - ☒ 3. The nature of creativity, its benefits and challenges.
 - ☒ 4. The nature of fancy and imagination.

Question ID : 264330165134

Option 1 ID : 264330647644

Option 2 ID : 264330647643

Option 3 ID : 264330647646

Option 4 ID : 264330647645

Status : Answered

Chosen Option : 3

Comprehension:

Read the given passage carefully and answer the questions that follow.

Throughout history, the intricacies of the human mind have been the subject of fascination and inquiry. From ancient philosophers to modern-day neuroscientists, the workings of the brain have been studied and analysed in an attempt to unravel its mysteries. However, despite centuries of research, much remains unknown about the complexities of human cognition and consciousness.

One of the most fascinating aspects of the human mind is its ability to create and imagine. The human mind has the capacity to conceptualise and bring into being ideas that were previously unknown or unimaginable, from artistic expression to scientific discovery. The process of creativity has captured the attention of scholars and laypeople alike and is both enigmatic and awe-inspiring.

There have been many theories proposed to explain the process of creativity. Some suggest that it is a purely subconscious process, while others argue that creativity is a result of conscious effort and intentional problem-solving. Still others suggest that creativity arises from a combination of conscious and subconscious processes.

Despite the ongoing debate over the nature of creativity, one thing is clear: it is a multifaceted and complex phenomenon. Creativity can manifest in a wide range of human activities, from the creation of art and literature to the development of scientific theories and inventions. It can occur in both individual and collective contexts and can be driven by a variety of factors such as curiosity, passion, or the desire for recognition.

Creativity also has the potential to bring about positive change in the world. Throughout history, creative individuals and groups have used their talents to address social, political, and environmental challenges, often inspiring others to take action and make a difference. From the abolitionist movement to the civil rights movement to the environmental movement, creativity has played a crucial role in promoting social justice and positive change.

Despite the many benefits of creativity, it is not without its challenges. The process of creative expression can be fraught with obstacles, from self-doubt and insecurity to external pressures and constraints. Moreover, not all creative ideas are successful or well-received, and many artists and innovators face rejection and criticism as they seek to bring their ideas to fruition.

Despite these challenges, however, the human drive to create and imagine persists.

Individuals and groups continue to harness the power of creativity to make a difference in the world. From the humblest amateur artist to the most celebrated innovator, the human capacity for creativity remains one of our greatest strengths and sources of inspiration.

SubQuestion No : 48

Q.48 Which of the following factors can drive creativity?

- Ans
- ☒ 1. Self-doubt and insecurity
 - ☒ 2. Curiosity and passion
 - ☒ 3. Fancy and imagination
 - ☒ 4. External pressures and constraints

Question ID : 264330165135

Option 1 ID : 264330647647

Option 2 ID : 264330647649

Option 3 ID : 264330647650

Option 4 ID : 264330647648

Status : Not Answered

Chosen Option : --

Comprehension:

Read the given passage carefully and answer the questions that follow.

Throughout history, the intricacies of the human mind have been the subject of fascination and inquiry. From ancient philosophers to modern-day neuroscientists, the workings of the brain have been studied and analysed in an attempt to unravel its mysteries. However, despite centuries of research, much remains unknown about the complexities of human cognition and consciousness.

One of the most fascinating aspects of the human mind is its ability to create and imagine. The human mind has the capacity to conceptualise and bring into being ideas that were previously unknown or unimaginable, from artistic expression to scientific discovery. The process of creativity has captured the attention of scholars and laypeople alike and is both enigmatic and awe-inspiring.

There have been many theories proposed to explain the process of creativity. Some suggest that it is a purely subconscious process, while others argue that creativity is a result of conscious effort and intentional problem-solving. Still others suggest that creativity arises from a combination of conscious and subconscious processes.

Despite the ongoing debate over the nature of creativity, one thing is clear: it is a multifaceted and complex phenomenon. Creativity can manifest in a wide range of human activities, from the creation of art and literature to the development of scientific theories and inventions. It can occur in both individual and collective contexts and can be driven by a variety of factors such as curiosity, passion, or the desire for recognition.

Creativity also has the potential to bring about positive change in the world. Throughout history, creative individuals and groups have used their talents to address social, political, and environmental challenges, often inspiring others to take action and make a difference. From the abolitionist movement to the civil rights movement to the environmental movement, creativity has played a crucial role in promoting social justice and positive change.

Despite the many benefits of creativity, it is not without its challenges. The process of creative expression can be fraught with obstacles, from self-doubt and insecurity to external pressures and constraints. Moreover, not all creative ideas are successful or well-received, and many artists and innovators face rejection and criticism as they seek to bring their ideas to fruition. Despite these challenges, however, the human drive to create and imagine persists.

Individuals and groups continue to harness the power of creativity to make a difference in the world. From the humblest amateur artist to the most celebrated innovator, the human capacity for creativity remains one of our greatest strengths and sources of inspiration.

SubQuestion No : 49

Q.49 According to the passage, what is one of the challenges of creative expression?

- Ans
- ☒ 1. The absence of external pressures and constraints.
 - ☒ 2. The limited capacity of the human mind.
 - ☒ 3. The lack of appreciation for creative ideas.
 - ☒ 4. The overemphasis on conscious problem-solving.

Question ID : 264330165136
Option 1 ID : 264330647654
Option 2 ID : 264330647652
Option 3 ID : 264330647651
Option 4 ID : 264330647653
Status : Not Answered
Chosen Option : --

Comprehension:

Read the given passage carefully and answer the questions that follow.

Throughout history, the intricacies of the human mind have been the subject of fascination and inquiry. From ancient philosophers to modern-day neuroscientists, the workings of the brain have been studied and analysed in an attempt to unravel its mysteries. However, despite centuries of research, much remains unknown about the complexities of human cognition and consciousness.

One of the most fascinating aspects of the human mind is its ability to create and imagine. The human mind has the capacity to conceptualise and bring into being ideas that were previously unknown or unimaginable, from artistic expression to scientific discovery. The process of creativity has captured the attention of scholars and laypeople alike and is both enigmatic and awe-inspiring.

There have been many theories proposed to explain the process of creativity. Some suggest that it is a purely subconscious process, while others argue that creativity is a result of conscious effort and intentional problem-solving. Still others suggest that creativity arises from a combination of conscious and subconscious processes.

Despite the ongoing debate over the nature of creativity, one thing is clear: it is a multifaceted and complex phenomenon. Creativity can manifest in a wide range of human activities, from the creation of art and literature to the development of scientific theories and inventions. It can occur in both individual and collective contexts and can be driven by a variety of factors such as curiosity, passion, or the desire for recognition.

Creativity also has the potential to bring about positive change in the world. Throughout history, creative individuals and groups have used their talents to address social, political, and environmental challenges, often inspiring others to take action and make a difference. From the abolitionist movement to the civil rights movement to the environmental movement, creativity has played a crucial role in promoting social justice and positive change.

Despite the many benefits of creativity, it is not without its challenges. The process of creative expression can be fraught with obstacles, from self-doubt and insecurity to external pressures and constraints. Moreover, not all creative ideas are successful or well-received, and many artists and innovators face rejection and criticism as they seek to bring their ideas to fruition. Despite these challenges, however, the human drive to create and imagine persists.

Individuals and groups continue to harness the power of creativity to make a difference in the world. From the humblest amateur artist to the most celebrated innovator, the human capacity for creativity remains one of our greatest strengths and sources of inspiration.

SubQuestion No : 50

Q.50 Select the most appropriate ANTONYM for the word 'fraught'.

- Ans
- ☒ 1. Tranquil
 - ☒ 2. Calm
 - ☒ 3. Beset
 - ☒ 4. Devoid

Question ID : 264330165137
Option 1 ID : 264330647656
Option 2 ID : 264330647658
Option 3 ID : 264330647655
Option 4 ID : 264330647657
Status : Not Answered
Chosen Option : --