

Sub Inspector in Delhi Police and Central Armed Police Forces Examination 2023  
Paper I

Roll Number	
Candidate Name	
Venue Name	
Exam Date	03/10/2023
Exam Time	4:00 PM - 6:00 PM
Subject	SICPO Paper I 2023

Section : General Intelligence and Reasoning

**Q.1** Select the option that represents the letters that, when sequentially placed from left to right in the blanks below, will complete the letter series.

L \_ \_ A \_ \_ S \_ \_ K \_ \_ L \_ \_ A

Ans ☒ 1. ASLKALSAKA

☒ 2. KSKKALSAKA

☒ 3. KSLKALSAKS

☒ 4. KSLKALSAKA

Question ID : 26433079375

Option 1 ID : 264330311491

Option 2 ID : 264330311489

Option 3 ID : 264330311490

Option 4 ID : 264330311488

Status : Answered

Chosen Option : 3

**Q.2** Select the set in which the numbers are related in the same way as the numbers of the given sets.

(NOTE : Operations should be performed on the whole numbers, without breaking down the numbers into its constituent digits. E.g. 13 – Operations on 13 such as adding /subtracting /multiplying etc. to 13 can be performed. Breaking down 13 into 1 and 3 and then performing mathematical operations on 1 and 3 is not allowed.)

(6, 8, 106)

(7, 11, 177)

Ans ☒ 1. (8, 7, 119)

☒ 2. (9, 8, 154)

☒ 3. (5, 9, 101)

☒ 4. (7, 9, 136)

Question ID : 26433069114

Option 1 ID : 264330270971

Option 2 ID : 264330270969

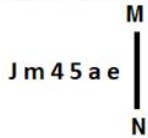
Option 3 ID : 264330270970

Option 4 ID : 264330270968

Status : Answered

Chosen Option : 2

Q.3 Select the correct mirror image of the given figure when the mirror is placed at MN as shown.



- Ans
- ✓ 1. e a 2 4 m l
  - ✗ 2. e a 4 5 m l
  - ✗ 3. l m 4 2 e a
  - ✗ 4. e a 5 4 m l

Question ID : 26433055953  
Option 1 ID : 264330218798  
Option 2 ID : 264330218799  
Option 3 ID : 264330218796  
Option 4 ID : 264330218797  
Status : Answered  
Chosen Option : 1

Q.4 A @ B means 'A is the husband of B'  
A & B means 'A is the mother of B'  
A # B means 'A is the daughter of B'  
If D & G @ F & E @ H, then how is G related to H?

- Ans
- ✓ 1. Husband's father
  - ✗ 2. Husband's mother
  - ✗ 3. Mother
  - ✗ 4. Father

Question ID : 264330126023  
Option 1 ID : 264330493765  
Option 2 ID : 264330493764  
Option 3 ID : 264330493767  
Option 4 ID : 264330493766  
Status : Answered  
Chosen Option : 1

Q.5 In a certain code language, 'TOWER' is written as 'INGYL' and 'SIGHT' is written as 'JTWVJ'. How will 'BRING' be written in that language?

- Ans
- ✗ 1. LWYDB
  - ✗ 2. ACTBE
  - ✗ 3. KRPJS
  - ✓ 4. AKUPW

Question ID : 26433074756  
Option 1 ID : 264330293115  
Option 2 ID : 264330293114  
Option 3 ID : 264330293112  
Option 4 ID : 264330293113  
Status : Not Attempted and Marked For Review  
Chosen Option : --

Q.6 If 'x' means '-', '+' means '÷', '-' means '+', and '÷' means 'x', what will be the value of the following expression?  
 $40 + \{[(24 - 12) \times (2 \div 2)] + (18 \times 10)\}$

- Ans ☒ 1. 10  
☐ 2. 20  
☐ 3. 1  
☐ 4. 5

Question ID : 264330129641  
Option 1 ID : 264330507932  
Option 2 ID : 264330507933  
Option 3 ID : 264330507930  
Option 4 ID : 264330507931  
Status : Answered  
Chosen Option : 1

Q.7 In this question, three statements are given, followed by two conclusions numbered I and II. Assuming the statements to be true, even if they seem to be at variance with commonly known facts, decide which of the conclusions logically follows/follow from the statements.  
Statements:  
I. No dean is a teacher.  
II. All teachers are professors.  
III. No professor is a lecturer.  
Conclusions:  
I. Some deans are lecturers.  
II. Some teachers are lecturers.

- Ans ☐ 1. Only conclusion II follows  
☐ 2. Only conclusion I follows  
☐ 3. Both conclusions I and II follow  
☒ 4. Neither conclusion I nor II follows

Question ID : 264330104076  
Option 1 ID : 264330408606  
Option 2 ID : 264330408605  
Option 3 ID : 264330408607  
Option 4 ID : 264330408608  
Status : Answered  
Chosen Option : 4

Q.8 Select the correct combination of mathematical signs to sequentially replace the \* signs and to balance the given equation.  
 $42 * 7 * 3 * 2 * 13 * 7$

- Ans ☐ 1. ÷, x, -, =, x  
☐ 2. +, =, ÷, x, +  
☐ 3. ÷, x, =, +, +  
☒ 4. ÷, x, +, =, +

Question ID : 264330132053  
Option 1 ID : 264330517309  
Option 2 ID : 264330517308  
Option 3 ID : 264330517307  
Option 4 ID : 264330517310  
Status : Answered  
Chosen Option : 4

Q.9 In a certain code language, 'Here we go' is coded as 'asa te du' and 'We can go' is coded as 'du mu asa'. What is the code for the word 'Here'?

- Ans
- ☒ 1. mu
  - ☒ 2. asa
  - ☒ 3. du
  - ☒ 4. te

Question ID : 26433074768  
Option 1 ID : 264330293163  
Option 2 ID : 264330293160  
Option 3 ID : 264330293162  
Option 4 ID : 264330293161  
Status : Answered  
Chosen Option : 4

Q.10 Three of the following letter-clusters are alike in some manner and one is different. Select the one that is different.

- Ans
- ☒ 1. QJPK
  - ☒ 2. KOLN
  - ☒ 3. MQNP
  - ☒ 4. XBYA

Question ID : 264330145348  
Option 1 ID : 264330569648  
Option 2 ID : 264330569647  
Option 3 ID : 264330569650  
Option 4 ID : 264330569649  
Status : Answered  
Chosen Option : 1

Q.11 Select the correct option that indicates the arrangement of the given words in the order in which they appear in an English dictionary.

- 1. Glory
- 2. Glossary
- 3. Globe
- 4. Gloss
- 5. Glow
- 6. Gloomy

- Ans
- ☒ 1. 3, 1, 6, 4, 2, 5
  - ☒ 2. 3, 6, 1, 2, 4, 5
  - ☒ 3. 3, 6, 1, 4, 2, 5
  - ☒ 4. 6, 3, 1, 4, 2, 5

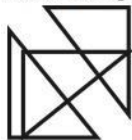
Question ID : 264330145378  
Option 1 ID : 264330569768  
Option 2 ID : 264330569770  
Option 3 ID : 264330569767  
Option 4 ID : 264330569769  
Status : Answered  
Chosen Option : 3

Q.12 If '+' means '-', '-' means '+', '÷' means 'x' and 'x' means '+', then what will come in place of the (?) in the following equation?  
 $15 \div 405 - 3 + 25 \times 5 = ?$

- Ans
- ☒ 1. 1890
  - ☒ 2. 2000
  - ☒ 3. 2005
  - ☒ 4. 1889

Question ID : 264330114251  
Option 1 ID : 264330449091  
Option 2 ID : 264330449089  
Option 3 ID : 264330449090  
Option 4 ID : 264330449092  
Status : Answered  
Chosen Option : 3

Q.13 Select the option that is embedded in the given figure as its part (rotation is NOT allowed)



Ans

- ☒ 1.
- ☒ 2.
- ☒ 3.
- ☒ 4.

Question ID : 264330145468  
Option 1 ID : 264330570127  
Option 2 ID : 264330570130  
Option 3 ID : 264330570129  
Option 4 ID : 264330570128  
Status : Answered  
Chosen Option : 3

Q.14 Two statements are given, followed by two conclusions numbered I and II. Assuming the statements to be true, even if they seem to be at variance with commonly known facts, decide which of the conclusions logically follow(s) from the statements.

Statements:

All cupboards are shelves.

All shelves are drawers.

Conclusions:

I. All cupboards are drawers.

II. All drawers are shelves.

Ans ☒ 1. Neither conclusion I nor II follows

☒ 2. Both conclusions I and II follow

☒ 3. Only conclusion II follows

☒ 4. Only conclusion I follows

Question ID : 26433056710

Option 1 ID : 264330221827

Option 2 ID : 264330221826

Option 3 ID : 264330221825

Option 4 ID : 264330221824

Status : Answered

Chosen Option : 4

Q.15 Which of the following terms will replace the question mark (?) in the given series?

WWVU , USTQ , ? , QKPI , OGN E

Ans ☒ 1. SQRM

☒ 2. SORW

☒ 3. SORM

☒ 4. SROM

Question ID : 264330102491

Option 1 ID : 264330402396

Option 2 ID : 264330402395

Option 3 ID : 264330402393

Option 4 ID : 264330402394

Status : Answered

Chosen Option : 3

Q.16 In a certain code language, 'CARD' is coded as '3597' and 'DOGS' is coded as '8346'.

What is the code for 'D' in the given code language?

Ans ☒ 1. 4

☒ 2. 9

☒ 3. 5

☒ 4. 3

Question ID : 264330169656

Option 1 ID : 264330665325

Option 2 ID : 264330665324

Option 3 ID : 264330665323

Option 4 ID : 264330665326

Status : Answered

Chosen Option : 4

Q.17 Which figure from the given options would replace the question mark (?) if the following figure series were to be continued?

X	O	Δ	T	X	O	Δ	T	
	S		C		□		⌒	
T	Δ	O	X	T	Δ	O	X	?

Ans

✗ 1.

X	O		
	⌒		
	T	Δ	

✗ 2.

Δ	O		
	P		
	T	X	

✓ 3.

X	O		
	P		
	T	Δ	

✗ 4.

X	T		
	P		
	O	Δ	

Question ID : 264330145484

Option 1 ID : 264330570192

Option 2 ID : 264330570191

Option 3 ID : 264330570193

Option 4 ID : 264330570194

Status : Answered

Chosen Option : 3

Q.18 Select the option figure in which the given figure is embedded (rotation is NOT allowed).

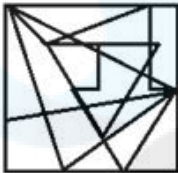


Ans

✗ 1.



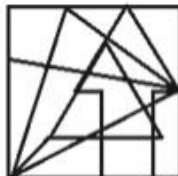
✗ 2.



✗ 3.



✓ 4.



Question ID : 264330145472

Option 1 ID : 264330570146

Option 2 ID : 264330570145

Option 3 ID : 264330570144

Option 4 ID : 264330570143

Status : Answered

Chosen Option : 4

Q.19 In a certain code language, 'BED' is coded as 9 and 'TABLE' is coded as 25. How will 'RECLINER' be coded in the same language?

Ans ✗ 1. 58

✗ 2. 72

✗ 3. 36

✓ 4. 64

Question ID : 264330132207

Option 1 ID : 264330517926

Option 2 ID : 264330517925

Option 3 ID : 264330517923

Option 4 ID : 264330517924

Status : Answered

Chosen Option : 4



**Q.20** Six students are sitting around a circular table facing the centre. A is an immediate neighbour of both E and D. E sits third to the right of C. D sits third to the left of F. E is an immediate neighbour of F. B sits second to the left of E. Who sits to the immediate left of C?

- Ans ☒ 1. B  
☒ 2. D  
☒ 3. E  
☒ 4. A

Question ID : 26433068167

Option 1 ID : 264330267181

Option 2 ID : 264330267182

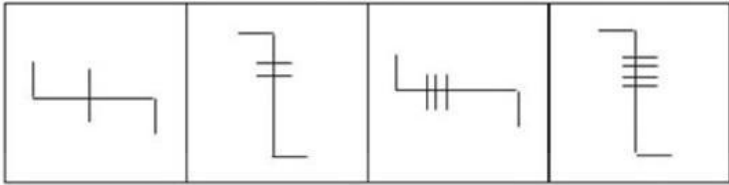
Option 3 ID : 264330267183

Option 4 ID : 264330267180

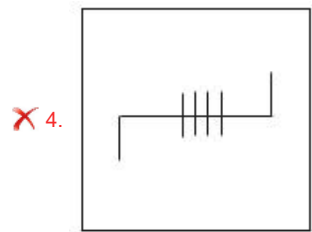
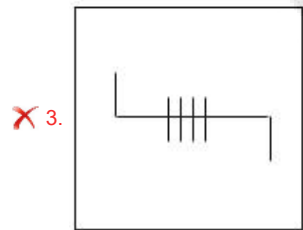
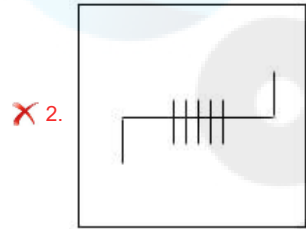
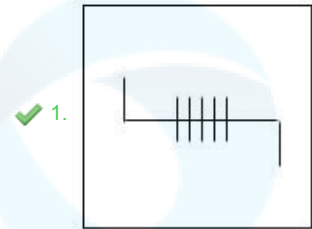
Status : Answered

Chosen Option : 2

Q.21 Which of the given figures when placed in the 5<sup>th</sup> position would continue the series that is established by the first four figures?



Ans



Question ID : 26433087303

Option 1 ID : 264330342851

Option 2 ID : 264330342850

Option 3 ID : 264330342849

Option 4 ID : 264330342852

Status : Answered

Chosen Option : 1

**Q.22** Given below are two statements and two conclusions. Take the statements to be true even if they are at variance with commonly known facts, and decide whether the conclusion(s) follow(s) the given statements.

**Statements:**

All dogs are cats.

Some cats are not dolls.

**Conclusions:**

I. All dolls are cats.

II. Some cats are dogs.

- Ans**   ☒ 1. Only conclusion II follows  
☐ 2. Only conclusion I follows  
☐ 3. Both the conclusions follow  
☐ 4. Neither conclusion I nor II follows

Question ID : 26433056638

Option 1 ID : 264330221537

Option 2 ID : 264330221536

Option 3 ID : 264330221538

Option 4 ID : 264330221539

Status : Answered

Chosen Option : 1

**Q.23** If A denotes '+', B denotes '×', C denotes '−', and D denotes '÷', then what will be the value of the following equation?  
80 C 16 B 4 A 96 D 4 = ?

- Ans**   ☐ 1. 37  
☐ 2. 54  
☐ 3. 120  
☒ 4. 40

Question ID : 264330129788

Option 1 ID : 264330508383

Option 2 ID : 264330508384

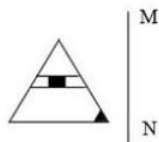
Option 3 ID : 264330508385

Option 4 ID : 264330508386

Status : Answered

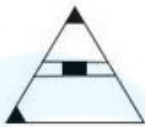
Chosen Option : 4

Q.24 Select the correct mirror image of the given figure when the mirror is placed at line MN as shown.

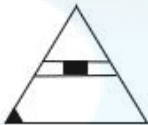


Ans

✗ 1.



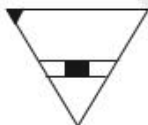
✓ 2.



✗ 3.



✗ 4.



Question ID : 26433056620

Option 1 ID : 264330221465

Option 2 ID : 264330221467

Option 3 ID : 264330221464

Option 4 ID : 264330221466

Status : Answered

Chosen Option : 2

Q.25 If '+' means '÷', '-' means '×', '×' means '-', and '÷' means '+', then what will be the value of the following expression?  
 $108 \times 343 + 7 - 2 \div 13 = ?$

Ans ✓ 1. 23

✗ 2. 19

✗ 3. 28

✗ 4. 44

Question ID : 264330101247

Option 1 ID : 264330397535

Option 2 ID : 264330397533

Option 3 ID : 264330397534

Option 4 ID : 264330397536

Status : Answered

Chosen Option : 1

Q.26 Four letter-clusters have been given, out of which three are alike in some manner and one is different. Select the odd letter-cluster.

- Ans ☒ 1. SUPT  
☒ 2. JLGK  
☒ 3. EHBG  
☒ 4. PRMQ

Question ID : 264330180756  
Option 1 ID : 264330708991  
Option 2 ID : 264330708994  
Option 3 ID : 264330708992  
Option 4 ID : 264330708993  
Status : Answered  
Chosen Option : 3

Q.27 'C @ D' means 'C is the mother of D'.  
'C \$ D' means 'C is the brother of D'.  
'C # D' means 'C is the sister of D'.  
'C \* D' means 'C is the father of D'.  
If V \$ Y @ G \* F, then how is Y related to F?

- Ans ☒ 1. Father's mother  
☒ 2. Sister  
☒ 3. Father's sister  
☒ 4. Brother

Question ID : 264330145389  
Option 1 ID : 264330569813  
Option 2 ID : 264330569811  
Option 3 ID : 264330569812  
Option 4 ID : 264330569814  
Status : Answered  
Chosen Option : 1

Q.28 Select the option that is related to the third word in the same way as the second word is related to the first word.  
(The words must be considered as meaningful words and must not be related to each other based on the number of letters/number of consonants/vowels in the word.)  
Cat : Paw :: Crow : ?

- Ans ☒ 1. Hoff  
☒ 2. Wings  
☒ 3. Beak  
☒ 4. Claw

Question ID : 26433087293  
Option 1 ID : 264330342812  
Option 2 ID : 264330342809  
Option 3 ID : 264330342810  
Option 4 ID : 264330342811  
Status : Not Attempted and Marked For Review  
Chosen Option : --

Q.29 Which of the following numbers will replace the question mark (?) in the given series?  
13, 14, -2, 79, -177 ?

- Ans ☒ 1. 424  
☒ 2. 528  
☒ 3. 608  
☒ 4. 448

Question ID : 26433069197  
Option 1 ID : 264330271302  
Option 2 ID : 264330271301  
Option 3 ID : 264330271300  
Option 4 ID : 264330271303  
Status : Not Attempted and Marked For Review  
Chosen Option : --

Q.30 In a certain code language, 'How are you' is coded as 'si de tu' and 'You are fine' is coded as 'de mu si'. What is the code for the word 'How'?

- Ans ☒ 1. mu  
☒ 2. tu  
☒ 3. de  
☒ 4. si

Question ID : 26433074767  
Option 1 ID : 264330293159  
Option 2 ID : 264330293158  
Option 3 ID : 264330293157  
Option 4 ID : 264330293156  
Status : Answered  
Chosen Option : 2

Q.31 Manoj starts from point A and drives X km towards the south and then turns left and drives Y km. He then takes a right turn and drives for 4 km to reach point D. If Manoj drove a total of 17 km between Points A and D, and both X and Y are perfect squares where  $X > Y$ , then what is the value of X ?

- Ans ☒ 1. 4  
☒ 2. 11  
☒ 3. 5  
☒ 4. 9

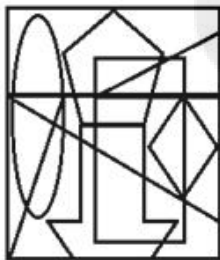
Question ID : 26433097237  
Option 1 ID : 264330381648  
Option 2 ID : 264330381647  
Option 3 ID : 264330381646  
Option 4 ID : 264330381645  
Status : Answered  
Chosen Option : 4

Q.32 If '+' means '-', '-' means 'x', 'x' means '÷' and '÷' means '+', what will come in place of '?' in the following equation?  
 $42 \times 7 - 11 \div 57 + 10 = ?$

- Ans ☒ 1. 133  
☒ 2. 113  
☒ 3. 103  
☒ 4. 123

Question ID : 264330101150  
Option 1 ID : 264330397147  
Option 2 ID : 264330397146  
Option 3 ID : 264330397148  
Option 4 ID : 264330397145  
Status : Answered  
Chosen Option : 2

Q.33 Select the option figure which is embedded in the given figure as its part (rotation is NOT allowed).



- Ans ☒ 1.
- ☒ 2.
- ☒ 3.
- ☒ 4.

Question ID : 264330145461  
Option 1 ID : 264330570102  
Option 2 ID : 264330570100  
Option 3 ID : 264330570101  
Option 4 ID : 264330570099  
Status : Answered  
Chosen Option : 2

Q.34 Which of the following terms will replace the question mark (?) in the given series?

PMRO NKTQ LIVS ? HEZW

- Ans
- ☒ 1. JGUX
  - ☒ 2. GJXU
  - ☒ 3. JGVU
  - ☒ 4. JGXU

Question ID : 26433085318  
Option 1 ID : 264330334973  
Option 2 ID : 264330334976  
Option 3 ID : 264330334974  
Option 4 ID : 264330334975  
Status : Answered  
Chosen Option : 4

Q.35 Which of the following numbers will replace the question mark (?) in the given series?

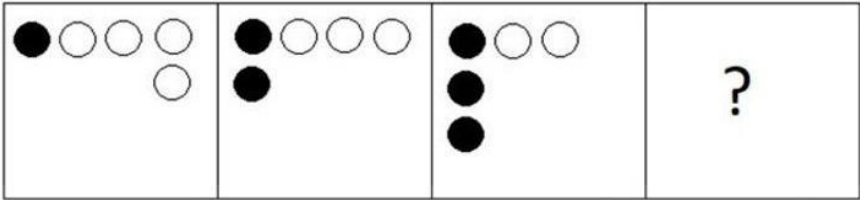
93, ?, 102, 111, 123, 138

- Ans
- ☒ 1. 95
  - ☒ 2. 96
  - ☒ 3. 98
  - ☒ 4. 97

Question ID : 26433091013  
Option 1 ID : 264330357462  
Option 2 ID : 264330357464  
Option 3 ID : 264330357463  
Option 4 ID : 264330357461  
Status : Answered  
Chosen Option : 2



Q.36 Select the figure that will come next in the following figure series.



Ans

- ✓ 1.
- ✗ 2.
- ✗ 3.
- ✗ 4.

Question ID : 26433087074  
Option 1 ID : 264330341938  
Option 2 ID : 264330341937  
Option 3 ID : 264330341940  
Option 4 ID : 264330341939  
Status : Answered  
Chosen Option : 1

Q.37 Select the option that represents the correct order of the given words as they would appear in an English dictionary?

- 1.Jalopy
- 2.Jabber
3. Jackpot
- 4.Jackdaw
- 5.Jackal

Ans ☒ 1. 2, 5, 4, 3, 1

☒ 2. 4, 5, 2, 3, 1

☒ 3. 3, 2, 4, 5, 1

☒ 4. 2, 4, 3, 1, 5

Question ID : 26433067240

Option 1 ID : 264330263472

Option 2 ID : 264330263475

Option 3 ID : 264330263474

Option 4 ID : 264330263473

Status : Answered

Chosen Option : 1

Q.38 A boy walks 15 m north, turns right and walks 20 m. Again, he turns right and walks 15 m. Finally, he turns to his left and moves 20 m. What is the distance now from his original position?

Ans ☒ 1. 40 m

☒ 2. 46 m

☒ 3. 50 m

☒ 4. 45 m

Question ID : 26433082762

Option 1 ID : 264330324881

Option 2 ID : 264330324883

Option 3 ID : 264330324884

Option 4 ID : 264330324882

Status : Answered

Chosen Option : 1

Q.39 Which of the following numbers will replace the question mark (?) in the given series?  
38, 64, 98, 140, ?

Ans ☒ 1. 190

☒ 2. 186

☒ 3. 188

☒ 4. 192

Question ID : 26433057329

Option 1 ID : 264330224301

Option 2 ID : 264330224303

Option 3 ID : 264330224300

Option 4 ID : 264330224302

Status : Answered

Chosen Option : 1

**Q.40** Six students Prateek, Sameer, Kabir, Ziya, Joseph, Kiran are sitting around a circular table facing the centre (not necessarily in the same order). Prateek is an immediate neighbour of both Sameer and Kabir. Ziya is sitting second to the right of Sameer. Kiran is sitting third to the left of Kabir. Joseph is an immediate neighbour of both Ziya and Kabir.  
Who is sitting to the immediate left of Joseph?

- Ans ☒ 1. Kabir  
☒ 2. Ziya  
☒ 3. Sameer  
☒ 4. Kiran

Question ID : 26433082276  
Option 1 ID : 264330322938  
Option 2 ID : 264330322937  
Option 3 ID : 264330322940  
Option 4 ID : 264330322939  
Status : Answered  
Chosen Option : 2

**Q.41** Select the set in which the numbers are related in the same way as are the numbers of the following sets.

(NOTE : Operations should be performed on the whole numbers, without breaking down the numbers into its constituent digits. E.g. 13 – Operations on 13 such as adding /subtracting /multiplying etc. to 13 can be performed. Breaking down 13 into 1 and 3 and then performing mathematical operations on 1 and 3 is NOT allowed)

(125, 87, 49), (236, 198, 160)

- Ans ☒ 1. (194, 162, 124)  
☒ 2. (222, 186, 140)  
☒ 3. (166, 128, 101)  
☒ 4. (277, 239, 201)

Question ID : 264330145302  
Option 1 ID : 264330569464  
Option 2 ID : 264330569465  
Option 3 ID : 264330569463  
Option 4 ID : 264330569466  
Status : Answered  
Chosen Option : 4

**Q.42** Which two mathematical signs should be interchanged to make the given equation correct?

$$(63 \times 21) + 8 + 99 \times 11 \div 16 + (12 \times 4) = 158$$

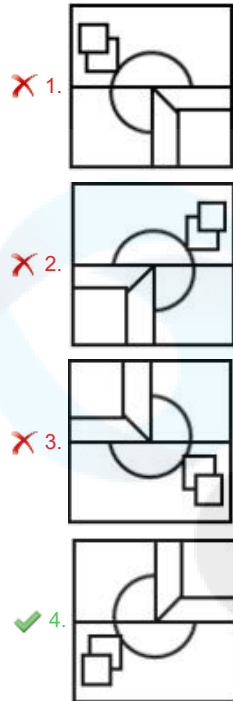
- Ans ☒ 1. + and –  
☒ 2. × and +  
☒ 3. × and –  
☒ 4. ÷ and ×

Question ID : 264330145308  
Option 1 ID : 264330569489  
Option 2 ID : 264330569488  
Option 3 ID : 264330569490  
Option 4 ID : 264330569487  
Status : Answered  
Chosen Option : 4

Q.43 Select the option in which the given figure is embedded (rotation is NOT allowed).



Ans



Question ID : 264330126083

Option 1 ID : 264330494004

Option 2 ID : 264330494007

Option 3 ID : 264330494005

Option 4 ID : 264330494006

Status : Answered

Chosen Option : 4

Q.44 Two statements are given followed by two conclusions numbered I and II. Assuming the statements to be true, even if they seem to be at variance with commonly known facts, decide which of the conclusions logically follow(s) from the statements.

Statements:

All goods are services.

No service is a delivery.

Conclusions:

I. No good is a delivery.

II. Some goods are deliveries.

- Ans
- ☒ 1. Neither conclusion I nor II follows
  - ☒ 2. Both conclusions I and II follow
  - ☒ 3. Only conclusion II follows
  - ☒ 4. Only conclusion I follows

Question ID : 26433058041

Option 1 ID : 264330227151

Option 2 ID : 264330227150

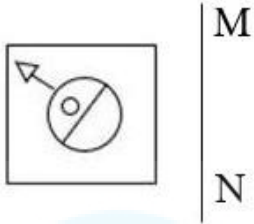
Option 3 ID : 264330227149

Option 4 ID : 264330227148

Status : Answered

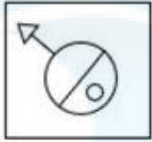
Chosen Option : 4

Q.45 Select the correct mirror image of the given figure when the mirror is placed at line MN as shown.

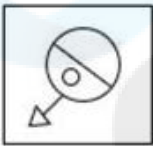


Ans

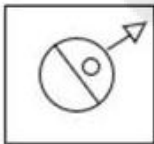
✗ 1.



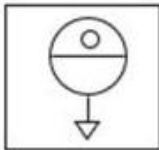
✗ 2.



✓ 3.



✗ 4.



Question ID : 26433056626

Option 1 ID : 264330221488

Option 2 ID : 264330221489

Option 3 ID : 264330221491

Option 4 ID : 264330221490

Status : Answered

Chosen Option : 3

Q.46 Which of the following numbers will replace the question mark (?) in the given series?  
1024, 256, 64, ?, 4

Ans ✗ 1. 32

✗ 2. 34

✗ 3. 36

✓ 4. 16

Question ID : 26433092492

Option 1 ID : 264330363257

Option 2 ID : 264330363258

Option 3 ID : 264330363259

Option 4 ID : 264330363260

Status : Answered

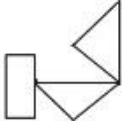
Chosen Option : 4

Q.47 Select the option that is related to the fourth term in the same way as the first term is related to the second term and the fifth term is related to the sixth term.  
5 : 21 :: ? : 252 :: 27 : 725

- Ans
- ☒ 1. 26
  - ☒ 2. 10
  - ☒ 3. 16
  - ☒ 4. 12

Question ID : 26433079356  
Option 1 ID : 264330311414  
Option 2 ID : 264330311412  
Option 3 ID : 264330311413  
Option 4 ID : 264330311415  
Status : Answered  
Chosen Option : 3

Q.48 Select the option in which the given figure is embedded (rotation is NOT allowed).



Ans

- ☒ 1.
- ☒ 2.
- ☒ 3.
- ☒ 4.

Question ID : 264330126082  
Option 1 ID : 264330494003  
Option 2 ID : 264330494002  
Option 3 ID : 264330494001  
Option 4 ID : 264330494000  
Status : Answered  
Chosen Option : 2

Q.49 Select the set in which the numbers are related in the same way as are the numbers of the following set.

(NOTE : Operations should be performed on the whole numbers, without breaking down the numbers into its constituent digits. E.g. 13 – Operations on 13 such as adding /subtracting /multiplying etc. to 13 can be performed. Breaking down 13 into 1 and 3 and then performing mathematical operations on 1 and 3 is NOT allowed)

(5, 4, 405)

(7, 3, 500)

- Ans ☒ 1. (4, 1, 125)  
☒ 2. (3, 2, 145)  
☒ 3. (4, 5, 850)  
☒ 4. (5, 8, 789)

Question ID : 264330145318

Option 1 ID : 264330569530

Option 2 ID : 264330569528

Option 3 ID : 264330569529

Option 4 ID : 264330569527

Status : Not Attempted and Marked For Review

Chosen Option : --

Q.50 Select the option that is related to the fifth letter-cluster in the same way as the second letter-cluster is related to the first letter-cluster and the fourth letter-cluster is related to the third letter-cluster.

CREATION : ETGCVKQP :: UNIVERSE : WPKXGTUG :: PLANET :?

- Ans ☒ 1. RNCPSV  
☒ 2. RCPNGV  
☒ 3. RPGVNC  
☒ 4. RPCGVN

Question ID : 264330145396

Option 1 ID : 264330569840

Option 2 ID : 264330569839

Option 3 ID : 264330569841

Option 4 ID : 264330569842

Status : Answered

Chosen Option : 1

Section : General Knowledge and General Awareness

Q.1 Identify the dam that is located in South India.

- Ans ☒ 1. Rihand dam  
☒ 2. Mettur dam  
☒ 3. Gandhi Sagar dam  
☒ 4. Tilaiya dam

Question ID : 264330113264

Option 1 ID : 264330445142

Option 2 ID : 264330445141

Option 3 ID : 264330445144

Option 4 ID : 264330445143

Status : Not Attempted and Marked For Review

Chosen Option : --

Q.2 Who is the author of the novel 'Before We Visit the Goddess'?

- Ans ☒ 1. Chitra Banerjee Divakaruni
- ☒ 2. Kiran Doshi
- ☒ 3. Arundhati Roy
- ☒ 4. Jhumpa Lahiri

Question ID : 264330145173  
Option 1 ID : 264330568949  
Option 2 ID : 264330568947  
Option 3 ID : 264330568950  
Option 4 ID : 264330568948  
Status : Not Attempted and Marked For Review  
Chosen Option : --

Q.3 When the President of India keeps a bill (except money bill and constitutional amendment bill) pending for an indefinite period, it is called \_\_\_\_\_.

- Ans ☒ 1. pocket veto of the President
- ☒ 2. suspensive veto of the President
- ☒ 3. absolute veto of the President
- ☒ 4. amendatory veto of the President

Question ID : 264330113415  
Option 1 ID : 264330445745  
Option 2 ID : 264330445746  
Option 3 ID : 264330445747  
Option 4 ID : 264330445748  
Status : Not Attempted and Marked For Review  
Chosen Option : --

Q.4 Which of the following union territories has the lowest literacy rate according to the 2011 census?

- Ans ☒ 1. Delhi
- ☒ 2. Dadra and Nagar Haveli
- ☒ 3. Lakshadweep
- ☒ 4. Daman and Diu

Question ID : 264330109509  
Option 1 ID : 264330430315  
Option 2 ID : 264330430314  
Option 3 ID : 264330430313  
Option 4 ID : 264330430316  
Status : Answered  
Chosen Option : 3



Q.5 Where are Huka Falls located?

- Ans
- ☐ 1. Spain
  - ☐ 2. Australia
  - ☒ 3. New Zealand
  - ☐ 4. Germany

Question ID : 26433064473  
Option 1 ID : 264330252487  
Option 2 ID : 264330252484  
Option 3 ID : 264330252485  
Option 4 ID : 264330252486  
Status : Not Attempted and Marked For Review  
Chosen Option : --

Q.6 A money bill under Article 111 of the Constitution of India, presented to the President for assent, has to be endorsed by a Certificate of the \_\_\_\_\_ signed by him/her that it is a money bill.

- Ans
- ☒ 1. Speaker of the Lok Sabha
  - ☐ 2. Secretary General of the Rajya Sabha
  - ☐ 3. Deputy Chairman of the Rajya Sabha
  - ☐ 4. Secretary General of the Lok Sabha

Question ID : 264330145266  
Option 1 ID : 264330569322  
Option 2 ID : 264330569320  
Option 3 ID : 264330569321  
Option 4 ID : 264330569319  
Status : Answered  
Chosen Option : 1

Q.7 Which state was the host of fifth Khelo India Youth Games 2022?

- Ans
- ☒ 1. Madhya Pradesh
  - ☐ 2. Uttarakhand
  - ☐ 3. Haryana
  - ☐ 4. Jharkhand

Question ID : 264330119246  
Option 1 ID : 264330467273  
Option 2 ID : 264330467272  
Option 3 ID : 264330467274  
Option 4 ID : 264330467271  
Status : Answered  
Chosen Option : 2

Q.8 Who among the following is considered as the 'Father of Carnatic Music in India'?

- Ans ☒ 1. Gopala  
☒ 2. Purandardas  
☒ 3. Narayan Tirtha  
☒ 4. Krishna Bharati

Question ID : 26433074823  
Option 1 ID : 264330293381  
Option 2 ID : 264330293380  
Option 3 ID : 264330293383  
Option 4 ID : 264330293382  
Status : Not Attempted and Marked For Review  
Chosen Option : --

Q.9 Terrestrial planets are composed of \_\_\_\_\_ .

- Ans ☒ 1. metals and air  
☒ 2. metals and gas  
☒ 3. rocks and gas  
☒ 4. rocks and metals

Question ID : 264330113352  
Option 1 ID : 264330445495  
Option 2 ID : 264330445493  
Option 3 ID : 264330445494  
Option 4 ID : 264330445496  
Status : Not Attempted and Marked For Review  
Chosen Option : --

Q.10 Which of the following is considered a capital expense?

- Ans ☒ 1. Payment of salaries  
☒ 2. Pension  
☒ 3. Construction of school buildings  
☒ 4. Subsidies

Question ID : 264330145243  
Option 1 ID : 264330569229  
Option 2 ID : 264330569230  
Option 3 ID : 264330569227  
Option 4 ID : 264330569228  
Status : Not Attempted and Marked For Review  
Chosen Option : --

Q.11 Which Goddess is associated with the Gangaur Festival celebrated in Central and Western India?

- Ans
- ☐ 1. Goddess Saraswati
  - ☐ 2. Goddess Lakshmi
  - ☒ 3. Goddess Parvati
  - ☐ 4. Goddess Kali

Question ID : 264330145142  
Option 1 ID : 264330568826  
Option 2 ID : 264330568823  
Option 3 ID : 264330568825  
Option 4 ID : 264330568824  
Status : Answered  
Chosen Option : 3

Q.12 In which of the following Indian states does the southwest monsoon set first to give rainfall?

- Ans
- ☐ 1. Goa
  - ☐ 2. Andhra Pradesh
  - ☒ 3. Kerala
  - ☐ 4. Tamil Nadu

Question ID : 264330119787  
Option 1 ID : 264330469426  
Option 2 ID : 264330469423  
Option 3 ID : 264330469425  
Option 4 ID : 264330469424  
Status : Answered  
Chosen Option : 3

Q.13 In which year did the 44th Amendment remove the right to property from the list of fundamental rights?

- Ans
- ☐ 1. 1975
  - ☒ 2. 1978
  - ☐ 3. 1981
  - ☐ 4. 1973

Question ID : 264330116398  
Option 1 ID : 264330457678  
Option 2 ID : 264330457679  
Option 3 ID : 264330457680  
Option 4 ID : 264330457677  
Status : Answered  
Chosen Option : 4

Q.14 In which year was the Small Industries Development Bank of India (SIDBI) set up?

- Ans
- ☒ 1. 1990
  - ☐ 2. 1988
  - ☐ 3. 1989
  - ☐ 4. 1987

Question ID : 264330145247  
Option 1 ID : 264330569246  
Option 2 ID : 264330569244  
Option 3 ID : 264330569245  
Option 4 ID : 264330569243  
Status : Not Answered  
Chosen Option : --

Q.15 Which Nobel Laureate conducted an experiment in the late 19<sup>th</sup> century and observed that a glass tube filled with a low-pressure gas emitted radiation when a voltage was applied between two metal plates?

- Ans
- ☒ 1. Victor Francis Hess
  - ☒ 2. Philipp Lenard
  - ☒ 3. Paul Dirac
  - ☒ 4. Hideki Yukawa

Question ID : 264330141665  
Option 1 ID : 264330554979  
Option 2 ID : 264330554982  
Option 3 ID : 264330554980  
Option 4 ID : 264330554981  
Status : Not Answered  
Chosen Option : --

Q.16 Which of the following Articles of the Indian Constitution mentions that all executive actions of the Government of India shall be expressed to be taken in the name of the President?

- Ans
- ☒ 1. Article 81
  - ☒ 2. Article 67
  - ☒ 3. Article 77
  - ☒ 4. Article 48

Question ID : 264330139436  
Option 1 ID : 264330546177  
Option 2 ID : 264330546176  
Option 3 ID : 264330546178  
Option 4 ID : 264330546175  
Status : Answered  
Chosen Option : 2

Q.17 Identify the third germinal layer found in triploblastic animals.

- Ans
- ☒ 1. Mesoderm
  - ☒ 2. Ectoderm
  - ☒ 3. Coelom
  - ☒ 4. Endoderm

Question ID : 264330145217  
Option 1 ID : 264330569126  
Option 2 ID : 264330569123  
Option 3 ID : 264330569125  
Option 4 ID : 264330569124  
Status : Not Attempted and Marked For Review  
Chosen Option : --

Q.18 What is the metric unit of pressure that is equal to 0.986923 atm?

- Ans ☒ 1. Bar  
☐ 2. Quart  
☐ 3. Gallon  
☐ 4. Yard

Question ID : 264330110059  
Option 1 ID : 264330432516  
Option 2 ID : 264330432513  
Option 3 ID : 264330432515  
Option 4 ID : 264330432514  
Status : Not Attempted and Marked For Review  
Chosen Option : --

Q.19 Famous musician Talvin Singh is associated with playing the \_\_\_\_\_.

- Ans ☐ 1. shehnai  
☐ 2. flute  
☐ 3. veena  
☒ 4. tabla

Question ID : 264330145187  
Option 1 ID : 264330569006  
Option 2 ID : 264330569005  
Option 3 ID : 264330569003  
Option 4 ID : 264330569004  
Status : Answered  
Chosen Option : 3

Q.20 During the year 1991–92, the industrial production recorded a \_\_\_\_\_ growth of \_\_\_\_\_.

- Ans ☐ 1. negative; 1.1 Percent  
☒ 2. positive; 0.6 Percent  
☐ 3. positive; 1.1 Percent  
☐ 4. negative; 0.9 Percent

Question ID : 264330114279  
Option 1 ID : 264330449203  
Option 2 ID : 264330449202  
Option 3 ID : 264330449204  
Option 4 ID : 264330449201  
Status : Not Attempted and Marked For Review  
Chosen Option : --

Q.21 Select the correct pair of classical dance and dancer.

- Ans ☒ 1. Padma Subrahmanyam – Bharatnatyam  
☐ 2. Mallika Sarabhai – Kathak  
☐ 3. Jhelum Paranjape – Kuchipudi  
☐ 4. K Uma Rama Rao – Odissi

Question ID : 264330141777  
Option 1 ID : 264330555428  
Option 2 ID : 264330555427  
Option 3 ID : 264330555429  
Option 4 ID : 264330555430  
Status : Answered  
Chosen Option : 1

Q.22 In which type of tax is the marginal tax rate higher than the average tax rate?

- Ans
- ☐ 1. Digressive
  - ☐ 2. Proportional
  - ☐ 3. Regressive
  - ☒ 4. Progressive

Question ID : 264330141432  
Option 1 ID : 264330554065  
Option 2 ID : 264330554063  
Option 3 ID : 264330554066  
Option 4 ID : 264330554064  
Status : Not Attempted and Marked For Review  
Chosen Option : --

Q.23 Which of the following Governor Generals, under the British rule in India, professionalised, bureaucratised and Europeanised the administration of East India Company?

- Ans
- ☐ 1. Lord Canning
  - ☒ 2. Lord Cornwallis
  - ☐ 3. Warren Hastings
  - ☐ 4. Lord Dalhousie

Question ID : 264330165381  
Option 1 ID : 264330648605  
Option 2 ID : 264330648606  
Option 3 ID : 264330648604  
Option 4 ID : 264330648603  
Status : Not Attempted and Marked For Review  
Chosen Option : --

Q.24 Which of the following elements is a member of the actinoid series?

- Ans
- ☐ 1. Magnesium
  - ☐ 2. Lanthanum
  - ☐ 3. Lutetium
  - ☒ 4. Thorium

Question ID : 264330131695  
Option 1 ID : 264330515881  
Option 2 ID : 264330515879  
Option 3 ID : 264330515880  
Option 4 ID : 264330515882  
Status : Not Attempted and Marked For Review  
Chosen Option : --

Q.25 'The Great Indian Novel' is written by \_\_\_\_\_ in which he based 'The Mahabharata' as a framework for his satirical novel.

Ans ☒ 1. Shashi Tharoor

☐ 2. Khushwant Singh

☐ 3. Sarojini Naidu

☐ 4. Kuldip Nayyar

Question ID : 26433071685

Option 1 ID : 264330281167

Option 2 ID : 264330281166

Option 3 ID : 264330281165

Option 4 ID : 264330281164

Status : Answered

Chosen Option : 1

Q.26 Alarmel Valli is an Indian classical dancer and choreographer and a foremost exponent of the \_\_\_\_\_ dance form of Bharatanatyam.

Ans ☐ 1. Tarangam style

☒ 2. Pandanallur style

☐ 3. Vazhuvoor style

☐ 4. Melattur style

Question ID : 264330145149

Option 1 ID : 264330568854

Option 2 ID : 264330568851

Option 3 ID : 264330568852

Option 4 ID : 264330568853

Status : Not Attempted and  
Marked For Review

Chosen Option : --

Q.27 In which of the following processes nutrients or contaminants are carried away by water or moved into the lower layer of the soil?

Ans ☐ 1. Ploughing

☒ 2. Leaching

☐ 3. Sowing

☐ 4. Bleaching

Question ID : 264330163195

Option 1 ID : 264330640094

Option 2 ID : 264330640093

Option 3 ID : 264330640092

Option 4 ID : 264330640091

Status : Not Attempted and  
Marked For Review

Chosen Option : --

Q.28 In July 2018, an experiment aboard the International Space Station cooled a cloud of atoms of which chemical element to one ten-millionth of one Kelvin above absolute zero, forming a Bose-Einstein Condensate in space?

Ans ☒ 1. Rubidium

☐ 2. Plutonium

☐ 3. Radium

☐ 4. Thorium

Question ID : 264330110065

Option 1 ID : 264330432539

Option 2 ID : 264330432538

Option 3 ID : 264330432537

Option 4 ID : 264330432540

Status : Not Attempted and  
Marked For Review

Chosen Option : --

Q.29 Malavikagnimitra, a drama of the 5th century CE, was written by \_\_\_\_\_.

Ans ☐ 1. Pingala

☒ 2. Kalidasa

☐ 3. Harisena

☐ 4. Bhavabhuti

Question ID : 264330165577

Option 1 ID : 264330649388

Option 2 ID : 264330649387

Option 3 ID : 264330649389

Option 4 ID : 264330649390

Status : Not Attempted and  
Marked For Review

Chosen Option : --

Q.30 Who was the first winner of the Arjuna Award in Kabaddi?

Ans ☒ 1. Sahanand Mahadev Shetty

☐ 2. Manjeet Chhillar

☐ 3. BC Ramesh

☐ 4. Bholanath Guin

Question ID : 26433092338

Option 1 ID : 264330362649

Option 2 ID : 264330362652

Option 3 ID : 264330362650

Option 4 ID : 264330362651

Status : Not Attempted and  
Marked For Review

Chosen Option : --



Q.31 The number of Pawn in chess is\_\_\_\_\_.

- Ans ☒ 1. 16  
☐ 2. 14  
☐ 3. 17  
☐ 4. 15

Question ID : 264330109730  
Option 1 ID : 264330431199  
Option 2 ID : 264330431197  
Option 3 ID : 264330431200  
Option 4 ID : 264330431198  
Status : Answered  
Chosen Option : 1

Q.32 Who made the use of Gun powder common in North India to defeat enemies?

- Ans ☐ 1. Ibrahim Lodi  
☒ 2. Babur  
☐ 3. Daulat Khan Lodi  
☐ 4. Rana Sanga

Question ID : 264330109023  
Option 1 ID : 264330428370  
Option 2 ID : 264330428371  
Option 3 ID : 264330428372  
Option 4 ID : 264330428369  
Status : Answered  
Chosen Option : 2

Q.33 By which Indian Constitutional Amendment Act was the 11<sup>th</sup> fundamental duty added in the Indian Constitution?

- Ans ☐ 1. 87<sup>th</sup> Constitutional Amendment Act  
☐ 2. 88<sup>th</sup> Constitutional Amendment Act  
☐ 3. 85<sup>th</sup> Constitutional Amendment Act  
☒ 4. 86<sup>th</sup> Constitutional Amendment Act

Question ID : 264330111513  
Option 1 ID : 264330438139  
Option 2 ID : 264330438140  
Option 3 ID : 264330438137  
Option 4 ID : 264330438138  
Status : Answered  
Chosen Option : 1

Q.34 Which of the following Acts prevents disrespect to the National Flag and National Anthem?

- Ans ☐ 1. Protection of National Honour Act, 1996  
☐ 2. Civil Liberties Act, 2001  
☐ 3. Unlawful Activities (Prevention) Act, 2006  
☒ 4. Prevention of Insults to National Honour Act, 1971

Question ID : 264330114751  
Option 1 ID : 264330451089  
Option 2 ID : 264330451091  
Option 3 ID : 264330451092  
Option 4 ID : 264330451090  
Status : Not Attempted and Marked For Review  
Chosen Option : --

**Q.35** In alchemy, aqua fortis is the classical name of which chemical compound that is used chiefly in the manufacture of explosives and fertilisers, and in organic synthesis?

- Ans ☒ 1. Nitric acid  
☐ 2. Formic acid  
☐ 3. Chloric acid  
☐ 4. Hydrobromic acid

Question ID : 26433055081

Option 1 ID : 264330215310

Option 2 ID : 264330215308

Option 3 ID : 264330215309

Option 4 ID : 264330215311

Status : **Not Attempted and Marked For Review**

Chosen Option : --

**Q.36** What is the height of the badminton net?

- Ans ☐ 1. 6 feet  
☐ 2. 6.5 feet  
☒ 3. 5.1 feet  
☐ 4. 5.5 feet

Question ID : 26433071382

Option 1 ID : 264330279953

Option 2 ID : 264330279954

Option 3 ID : 264330279952

Option 4 ID : 264330279955

Status : **Answered**

Chosen Option : 2

**Q.37** Which of the following mosques/masjids was built during the reign of Lodi dynasty of the Delhi Sultanate?

- Ans ☐ 1. Begumpuri mosque, Delhi  
☐ 2. Lal Masjid, Delhi  
☒ 3. Moth ki Masjid, Delhi  
☐ 4. Quwwat al-Islam, Delhi

Question ID : 264330106563

Option 1 ID : 264330418554

Option 2 ID : 264330418556

Option 3 ID : 264330418555

Option 4 ID : 264330418553

Status : **Answered**

Chosen Option : 3

Q.38 Sattriya was recognised in \_\_\_\_\_ as a Classical Dance by Sangeet Natak Akademi.

Ans ☒ 1. 2000

☒ 2. 2010

☒ 3. 2020

☒ 4. 2005

Question ID : 26433054502

Option 1 ID : 264330212992

Option 2 ID : 264330212994

Option 3 ID : 264330212995

Option 4 ID : 264330212993

Status : **Not Attempted and  
Marked For Review**

Chosen Option : --

Q.39 The synthesis of which chemical is inhibited due to aspirin?

Ans ☒ 1. Pyrites

☒ 2. Prostaglandins

☒ 3. Histamines

☒ 4. Analgesics

Question ID : 264330145207

Option 1 ID : 264330569086

Option 2 ID : 264330569083

Option 3 ID : 264330569084

Option 4 ID : 264330569085

Status : **Not Attempted and  
Marked For Review**

Chosen Option : --

Q.40 Who was the first ecologist to describe the specific shape of eco-trophic interactions, Which he called the pyramid of numbers, in the 1920s?

Ans ☒ 1. Charles Elton

☒ 2. Ernst Haeckel

☒ 3. Howard Thomas Odum

☒ 4. Edward O Wilson

Question ID : 264330145193

Option 1 ID : 264330569029

Option 2 ID : 264330569030

Option 3 ID : 264330569028

Option 4 ID : 264330569027

Status : **Not Attempted and  
Marked For Review**

Chosen Option : --

Q.41 Siddheshvara Mahadeva temple in Bengal depicts the architecture of which dynasty?

- Ans ☒ 1. Chalukaya dynasty  
☒ 2. Shung dynasty  
☒ 3. Hussain Shahi dynasty  
☒ 4. Pala dynasty

Question ID : 264330164856  
Option 1 ID : 264330646554  
Option 2 ID : 264330646553  
Option 3 ID : 264330646552  
Option 4 ID : 264330646551  
Status : Not Attempted and Marked For Review  
Chosen Option : --

Q.42 In 2010, considering its outstanding value and vulnerability, UNESCO recognised 'Mudiyettu', an age-old ritual-drama of \_\_\_\_\_, as an 'intangible cultural heritage of humanity'.

- Ans ☒ 1. Tamil Nadu  
☒ 2. Karnataka  
☒ 3. Kerala  
☒ 4. Telangana

Question ID : 26433054505  
Option 1 ID : 264330213004  
Option 2 ID : 264330213005  
Option 3 ID : 264330213006  
Option 4 ID : 264330213007  
Status : Not Attempted and Marked For Review  
Chosen Option : --

Q.43 Choose the INCORRECT statement related to monsoon.

- Ans ☒ 1. The Southwest Monsoon winds blow over the warm oceans, gather moisture and bring widespread rainfall over the mainland of India.  
☒ 2. The intensity and position of the high-pressure area, east of Madagascar, affects the Indian Monsoon.  
☒ 3. The difference in pressure over Tahiti (Pacific Ocean), and Darwin in northern Australia (Indian Ocean) is computed to predict the intensity of the monsoons.  
☒ 4. The western cyclonic disturbances occur due to withdrawal or the retreat of the monsoon.

Question ID : 264330169316  
Option 1 ID : 264330664043  
Option 2 ID : 264330664045  
Option 3 ID : 264330664044  
Option 4 ID : 264330664046  
Status : Not Attempted and Marked For Review  
Chosen Option : --

Q.44 The natural vegetation of India is broadly divided into \_\_\_\_\_ groups.

- Ans ☒ 1. 6  
☒ 2. 5  
☒ 3. 9  
☒ 4. 7

Question ID : 264330163241  
Option 1 ID : 264330640277  
Option 2 ID : 264330640278  
Option 3 ID : 264330640275  
Option 4 ID : 264330640276  
Status : Not Attempted and Marked For Review  
Chosen Option : --

Q.45 According to the Census of India 2011, what was the percentage of Sikh communities in the total population in India?

- Ans ☒ 1. 0.4%  
☒ 2. 79.8%  
☒ 3. 14.2%  
☒ 4. 1.7%

Question ID : 264330166807  
Option 1 ID : 264330654265  
Option 2 ID : 264330654264  
Option 3 ID : 264330654263  
Option 4 ID : 264330654266  
Status : Not Attempted and Marked For Review  
Chosen Option : --

Q.46 Which of the following is NOT a food preservative?

- Ans ☒ 1. Aqua regia  
☒ 2. Vinegar  
☒ 3. Sodium chloride  
☒ 4. Sodium nitrite

Question ID : 26433089678  
Option 1 ID : 264330352216  
Option 2 ID : 264330352213  
Option 3 ID : 264330352215  
Option 4 ID : 264330352214  
Status : Not Attempted and Marked For Review  
Chosen Option : --

Q.47 Losar (a new year festival) is celebrated in which of the following states?

- Ans ☒ 1. Jharkhand  
☒ 2. Arunachal Pradesh  
☒ 3. Himachal Pradesh  
☒ 4. Uttarakhand

Question ID : 264330164808  
Option 1 ID : 264330646360  
Option 2 ID : 264330646359  
Option 3 ID : 264330646362  
Option 4 ID : 264330646361  
Status : Answered  
Chosen Option : 2

Q.48 Who among the following leaders founded the women's wing of Congress in 1940?

- Ans ☒ 1. Lakshmi Sahgal  
☒ 2. Sarojini Naidu  
☒ 3. Sucheta Kriplani  
☒ 4. Aruna Asaf Ali

Question ID : 26433099176  
Option 1 ID : 264330389318  
Option 2 ID : 264330389320  
Option 3 ID : 264330389317  
Option 4 ID : 264330389319  
Status : Not Attempted and Marked For Review  
Chosen Option : --

Q.49 Which of the following schemes adopts the One District One Product (ODOP) approach to reap the benefit of scale in terms of procurement of inputs, availing common services and marketing of products?

- Ans ☒ 1. Pradhan Mantri Kisan Sampada Yojana  
☒ 2. Micro and Small Enterprises Cluster Development Programme (MSE-CDP)  
☒ 3. Production Linked Incentive Scheme For Food Processing Industry (PLISFPI)  
☒ 4. Pradhan Mantri Formalisation of Micro Food Processing Enterprises (PMFME)

Question ID : 26433064564  
Option 1 ID : 264330252849  
Option 2 ID : 264330252851  
Option 3 ID : 264330252850  
Option 4 ID : 264330252848  
Status : Not Attempted and Marked For Review  
Chosen Option : --

**Q.50** Which of the following Acts, enacted by the British Parliament, provided for the establishment of a Law Commission for the consolidation and codification of Indian Laws?

- Ans**
- ☒ 1. Indian Council Act, 1909
  - ☒ 2. Government of India Act, 1919
  - ☒ 3. Charter Act, 1813
  - ☒ 4. Charter Act, 1833

Question ID : 264330112336  
Option 1 ID : 264330441432  
Option 2 ID : 264330441429  
Option 3 ID : 264330441431  
Option 4 ID : 264330441430  
Status : Not Answered  
Chosen Option : --

Section : Quantitative Aptitude

**Q.1** What should be the value in place of (?) in  $7\frac{5}{8} + \frac{5}{8}$  of  $184 \times 15 \div 5 - (?) = 0$ .

- Ans**
- ☒ 1.  $-352\frac{5}{8}$
  - ☒ 2.  $152\frac{1}{8}$
  - ☒ 3.  $-152\frac{1}{8}$
  - ☒ 4.  $352\frac{5}{8}$

Question ID : 26433074217  
Option 1 ID : 264330290991  
Option 2 ID : 264330290990  
Option 3 ID : 264330290988  
Option 4 ID : 264330290989  
Status : Not Attempted and Marked For Review  
Chosen Option : --

Q.2 The following table shows the earning of different firms (in ₹ crore) in different years.

Firm \ Year	2012	2013	2014	2015	2016
P	50	45	49	56	57
Q	46	48	50	55	62
R	70	65	63	68	73
S	38	47	56	60	69

The earning (in ₹ crore) of which firm was highest in the year 2015?

- Ans
- ☐ 1. P
  - ☐ 2. S
  - ☒ 3. R
  - ☐ 4. Q

Question ID : 264330167426  
Option 1 ID : 264330656675  
Option 2 ID : 264330656678  
Option 3 ID : 264330656677  
Option 4 ID : 264330656676

Status : Answered

Chosen Option : 3

Q.3 A shopkeeper allows a discount of 15% on an article and still makes a profit of 20%. What does the shopkeeper pay for an article whose marked price is ₹7,200?

- Ans
- ☐ 1. ₹6,120
  - ☐ 2. ₹5,120
  - ☐ 3. ₹6,100
  - ☒ 4. ₹5,100

Question ID : 264330165164  
Option 1 ID : 264330647756  
Option 2 ID : 264330647757  
Option 3 ID : 264330647758  
Option 4 ID : 264330647755

Status : Answered

Chosen Option : 2



Q.4

If  $\tan A = \frac{2}{5}$  find the value of  $\frac{\sec^2 A}{\operatorname{cosec}^2 A}$ .

Ans

☐ 1.  $\frac{2}{5}$

☒ 2.  $\frac{4}{25}$

☐ 3.  $\frac{9}{25}$

☐ 4.  $\frac{3}{5}$

Question ID : 264330145127

Option 1 ID : 264330568763

Option 2 ID : 264330568765

Option 3 ID : 264330568766

Option 4 ID : 264330568764

Status : Answered

Chosen Option : 2

Q.5 What is the compound interest on a sum of ₹25,000 after three years at a rate of 12 percent per annum interest compounded yearly?

Ans

☐ 1. ₹9,824.00

☐ 2. ₹10,520.00

☐ 3. ₹9,956.86

☒ 4. ₹10,123.20

Question ID : 264330145044

Option 1 ID : 264330568431

Option 2 ID : 264330568434

Option 3 ID : 264330568432

Option 4 ID : 264330568433

Status : Answered

Chosen Option : 4

Q.6 The least number which should be added to 1351 so that the sum is exactly divisible by 2,4,6 and 8 is:

Ans

☐ 1. 11

☐ 2. 15

☐ 3. 13

☒ 4. 17

Question ID : 26433075090

Option 1 ID : 264330294448

Option 2 ID : 264330294450

Option 3 ID : 264330294449

Option 4 ID : 264330294451

Status : Answered

Chosen Option : 4

Q.7 In a  $\triangle PQR$  and  $\triangle ABC$ ,  $\angle P = \angle A$  and  $AC = PR$ . Which of the following conditions is true for triangle PQR and ABC to be congruent?

- Ans ☒ 1.  $AB = PQ$  by SSS  
☒ 2.  $AB = PQ$  by SAS  
☒ 3.  $BC = QR$  by ASS  
☒ 4.  $\angle Q = \angle B$  by AAA

Question ID : 264330157068

Option 1 ID : 264330615644

Option 2 ID : 264330615645

Option 3 ID : 264330615643

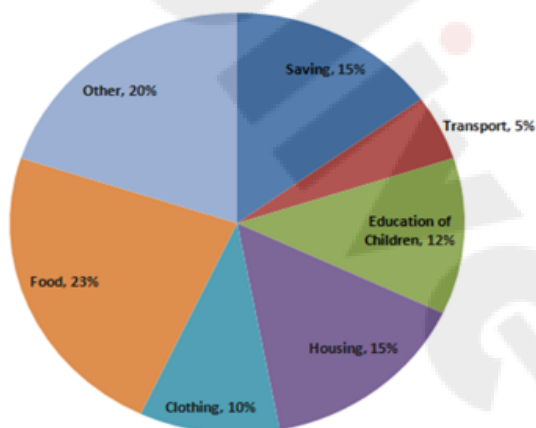
Option 4 ID : 264330615646

Status : Answered

Chosen Option : 3

Q.8 Study the given pie-chart and answer the question that follows.

The pie-chart shows the expenditure of a family on different items and their savings throughout the year 2021.



If the total income of the family was ₹1,00,000, how much money (in ₹) was spent on the education of the children?

- Ans ☒ 1. 12,500  
☒ 2. 12,000  
☒ 3. 13,500  
☒ 4. 13,000

Question ID : 264330163477

Option 1 ID : 264330641168

Option 2 ID : 264330641167

Option 3 ID : 264330641170

Option 4 ID : 264330641169

Status : Answered

Chosen Option : 2

Q.9 A vendor bought a book marked at ₹850 at successive discounts of 20% and 10%, respectively. He spent ₹55 on transport and sold the book for ₹980. What will be his profit percentage (rounded off to 2 decimal places)?

- Ans
- ☒ 1. 45.65%
  - ☒ 2. 48.25%
  - ☒ 3. 50.65%
  - ☒ 4. 46.93%

Question ID : 264330158255

Option 1 ID : 264330620379

Option 2 ID : 264330620381

Option 3 ID : 264330620382

Option 4 ID : 264330620380

Status : Not Attempted and Marked For Review

Chosen Option : --

Q.10 Two numbers are in the ratio of 4 : 3. The product of their HCF and LCM is 2700. The difference between the numbers is:

- Ans
- ☒ 1. 15
  - ☒ 2. 30
  - ☒ 3. 25
  - ☒ 4. 105

Question ID : 26433063440

Option 1 ID : 264330248412

Option 2 ID : 264330248414

Option 3 ID : 264330248415

Option 4 ID : 264330248413

Status : Answered

Chosen Option : 1

Q.11 Ramesh borrowed some money at rate of 5% per annum for the first four years, 8% per annum for the next six years, and 12% per annum for the period beyond ten years. If the total interest paid by him at the end of twelve years is ₹9,016, then find the money borrowed by Ramesh.

- Ans
- ☒ 1. ₹9,816
  - ☒ 2. ₹9,800
  - ☒ 3. ₹9,016
  - ☒ 4. ₹9,616

Question ID : 264330165525

Option 1 ID : 264330649182

Option 2 ID : 264330649181

Option 3 ID : 264330649179

Option 4 ID : 264330649180

Status : Answered

Chosen Option : 2

Q.12 The area of an equilateral triangle is  $4\sqrt{3}$  cm<sup>2</sup>. Find the side (in cm) of the triangle.

- Ans
- ☒ 1. 2
  - ☒ 2. 4
  - ☒ 3.  $\sqrt{3}$
  - ☒ 4.  $2\sqrt{3}$

Question ID : 264330157739

Option 1 ID : 264330618317

Option 2 ID : 264330618318

Option 3 ID : 264330618315

Option 4 ID : 264330618316

Status : Not Attempted and  
Marked For Review

Chosen Option : --

Q.13 The following table shows the percentage of students passing out of four colleges (A,B,C and D) over four years. Study the table and answer the question that follows.

Years	College A	College B	College C	College D
2019	68	78	56	78
2020	72	86	78	82
2021	78	91	82	85
2022	80	87	84	87

In which college is the average percentage of passing students over the given four years the least?

- Ans
- ☒ 1. College D
  - ☒ 2. College C
  - ☒ 3. College B
  - ☒ 4. College A

Question ID : 264330165159

Option 1 ID : 264330647738

Option 2 ID : 264330647737

Option 3 ID : 264330647736

Option 4 ID : 264330647735

Status : Answered

Chosen Option : 4

Q.14 The average weight of 15 people increases by 3.2 kg when a new person comes in place of one of them weighing 52 kg. The weight of the new person is:

- Ans
- ☒ 1. 48 kg
  - ☒ 2. 96 kg
  - ☒ 3. 100 kg
  - ☒ 4. 52 kg

Question ID : 264330165641

Option 1 ID : 264330649643

Option 2 ID : 264330649645

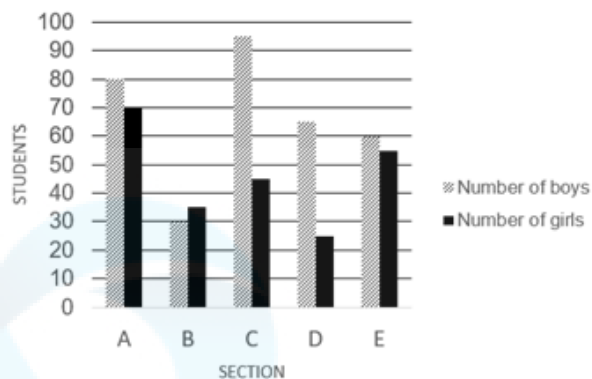
Option 3 ID : 264330649646

Option 4 ID : 264330649644

Status : Not Attempted and  
Marked For Review

Chosen Option : --

Q.15 Study the given graph and answer the following question.  
Number of boys and girls students in each section.



The number of boy students in section B is approximately what percentage of the number of girl students in section E?

- Ans
- ☒ 1. 25%
  - ☒ 2. 55%
  - ☒ 3. 45%
  - ☒ 4. 15%

Question ID : 264330165429

Option 1 ID : 264330648796

Option 2 ID : 264330648798

Option 3 ID : 264330648797

Option 4 ID : 264330648795

Status : Not Attempted and  
Marked For Review

Chosen Option : --

Q.16 If  $x \left( 5 - \frac{2}{x} \right) = \frac{5}{x}$ , then the value of  $x^2 + \frac{1}{x^2}$  is:

- Ans
- ☒ 1.  $\frac{54}{25}$
  - ☒ 2.  $\frac{53}{28}$
  - ☒ 3.  $\frac{53}{27}$
  - ☒ 4.  $\frac{54}{23}$

Question ID : 264330157071

Option 1 ID : 264330615657

Option 2 ID : 264330615656

Option 3 ID : 264330615655

Option 4 ID : 264330615658

Status : Answered

Chosen Option : 1

Q.17 The length and the breadth of the floor of a rectangular hall are 126 feet and 90 feet, respectively. What will be the area (in square feet) of each of the largest identical square tiles that can be used to tile this floor in a way that no part of the floor remains uncovered?

- Ans ☒ 1. 484  
☒ 2. 256  
☒ 3. 324  
☒ 4. 196

Question ID : 264330103226

Option 1 ID : 264330405211

Option 2 ID : 264330405210

Option 3 ID : 264330405212

Option 4 ID : 264330405209

Status : Not Attempted and  
Marked For Review

Chosen Option : --

Q.18 Study the given table and answer the question that follows.  
The table shows the consumption of food grains per day (in grams) in the given set of following years.

Year	Rice	Wheat	Coarse grains	Pulses
1960-62	161	62	131	61
1970-72	197	81	116	64
1980-82	187	116	103	46
1990-92	189	124	101	44
2000-02	201	137	86	64

For which food grain consumption was there successive increase over the given set of years?

- Ans ☒ 1. Rice  
☒ 2. Pulses  
☒ 3. Coarse grains  
☒ 4. Wheat

Question ID : 264330165467

Option 1 ID : 264330648947

Option 2 ID : 264330648950

Option 3 ID : 264330648949

Option 4 ID : 264330648948

Status : Answered

Chosen Option : 4

Q.19 The LCM of two prime numbers x and y ( $x > y$ ) is 533. The value of  $4y - x$  is:

- Ans ☒ 1. 18  
☒ 2. 11  
☒ 3. 23  
☒ 4. 21

Question ID : 26433064887

Option 1 ID : 264330254143

Option 2 ID : 264330254141

Option 3 ID : 264330254142

Option 4 ID : 264330254140

Status : Not Attempted and  
Marked For Review

Chosen Option : --

Q.20 If  $A + B = 90^\circ$ , then the expression  $\frac{\cot A}{\cot B} + \cos^2 A + \cos^2 B$  is equal to:

- Ans
- ☐ 1.  $\cot^2 B$
  - ☒ 2.  $\operatorname{cosec}^2 A$
  - ☐ 3.  $\cot^2 A$
  - ☐ 4.  $\operatorname{cosec}^2 B$

Question ID : 264330157076

Option 1 ID : 264330615675

Option 2 ID : 264330615676

Option 3 ID : 264330615677

Option 4 ID : 264330615678

Status : Not Attempted and  
Marked For Review

Chosen Option : --

Q.21 Ramesh does half as much work as Parul in  $\frac{4}{5}$  of the time. If together Ramesh and Parul take 24 days to complete the work, then how much time will Parul take to do it?

- Ans
- ☐ 1. 38 days
  - ☐ 2. 41 days
  - ☐ 3. 37 days
  - ☒ 4. 39 days

Question ID : 264330118430

Option 1 ID : 264330465121

Option 2 ID : 264330465123

Option 3 ID : 264330465124

Option 4 ID : 264330465122

Status : Not Attempted and  
Marked For Review

Chosen Option : --

Q.22 Study the given table and answer the question that follows.  
The table shows the number of employees in five different organisations A, B, C, D and E in different departments.

Dept ↓ Org→	A	B	C	D	E
HR	1050	1015	976	888	1004
Finance	1017	960	786	1025	963
Marketing	1382	1384	1275	1300	1290
Production	1542	1545	4550	1570	1580
Accounts	786	745	801	800	735
Legal	48	54	36	30	53
Total	5825	5703	5424	5613	5625

Which organisation has minimum number of employees?

- Ans
- ✓ 1. C
  - ✗ 2. B
  - ✗ 3. D
  - ✗ 4. E

Question ID : 264330157720  
Option 1 ID : 264330618240  
Option 2 ID : 264330618239  
Option 3 ID : 264330618241  
Option 4 ID : 264330618242  
Status : Answered  
Chosen Option : 1

Q.23 If  $\sin \theta + \cos \theta = \frac{\sqrt{11}}{3}$ , then the value of  $(\cos \theta - \sin \theta)$  is:

- Ans
- ✗ 1.  $\frac{\sqrt{5}}{3}$
  - ✗ 2.  $\frac{7}{3}$
  - ✗ 3.  $\frac{5}{3}$
  - ✓ 4.  $\frac{\sqrt{7}}{3}$

Question ID : 264330158304  
Option 1 ID : 264330620576  
Option 2 ID : 264330620577  
Option 3 ID : 264330620575  
Option 4 ID : 264330620578  
Status : Not Attempted and Marked For Review  
Chosen Option : --



Q.24 If  $(48 \div 72 \times 3) - [15 \div 8 \times (40 - 32) - 10] + 2P = 6 \div 2$ , then find the value of P?

- Ans ☒ 1. 3  
☐ 2. 4  
☐ 3. 2  
☐ 4. 1

Question ID : 26433071276  
Option 1 ID : 264330279530  
Option 2 ID : 264330279531  
Option 3 ID : 264330279529  
Option 4 ID : 264330279528  
Status : Answered  
Chosen Option : 1

Q.25 Mayur sold a watch at a profit of 7%. If he had sold it for ₹1,329 more, he would have gained 57%. Find the cost price (in ₹) of the watch.

- Ans ☐ 1. 2580  
☒ 2. 2658  
☐ 3. 2420  
☐ 4. 2856

Question ID : 264330102342  
Option 1 ID : 264330401834  
Option 2 ID : 264330401835  
Option 3 ID : 264330401833  
Option 4 ID : 264330401836  
Status : Answered  
Chosen Option : 2

Q.26 If  $A + \frac{1}{1 + \frac{1}{2 + \frac{1}{3}}} = \frac{9}{10}$ , then the value of A is:

- Ans ☒ 1.  $\frac{1}{5}$   
☐ 2.  $\frac{3}{10}$   
☐ 3.  $\frac{2}{5}$   
☐ 4.  $\frac{1}{10}$

Question ID : 264330157770  
Option 1 ID : 264330618440  
Option 2 ID : 264330618441  
Option 3 ID : 264330618442  
Option 4 ID : 264330618439  
Status : Answered  
Chosen Option : 1

**Q.27** Find the area of a rhombus if the perimeter of the rhombus is 52 cm, and one of its diagonals is 10 cm long.

- Ans ☒ 1. 120 cm<sup>2</sup>  
☒ 2. 164 cm<sup>2</sup>  
☒ 3. 160 cm<sup>2</sup>  
☒ 4. 144 cm<sup>2</sup>

Question ID : 26433080062  
Option 1 ID : 264330314197  
Option 2 ID : 264330314199  
Option 3 ID : 264330314196  
Option 4 ID : 264330314198  
Status : Not Attempted and Marked For Review  
Chosen Option : --

**Q.28** The speed of a boat in still water is 20 km/h, while the river is flowing at a speed of 8 km/h and the time taken to cover a certain distance upstream is 6 h more than the time taken to cover the same distance downstream. Find the distance.

- Ans ☒ 1. 120 km  
☒ 2. 336 km  
☒ 3. 126 km  
☒ 4. 125 km

Question ID : 26433083049  
Option 1 ID : 264330326030  
Option 2 ID : 264330326032  
Option 3 ID : 264330326029  
Option 4 ID : 264330326031  
Status : Not Attempted and Marked For Review  
Chosen Option : --

**Q.29** In an election between P and Q, P gets 40% of the total votes and thus loses by 10 votes. The total number of votes is:

- Ans ☒ 1. 80  
☒ 2. 50  
☒ 3. 90  
☒ 4. 70

Question ID : 264330145039  
Option 1 ID : 264330568412  
Option 2 ID : 264330568414  
Option 3 ID : 264330568413  
Option 4 ID : 264330568411  
Status : Answered  
Chosen Option : 2

Q.30 The price of a treadmill is marked at ₹1,250. A shopkeeper earns a profit of 14% after allowing a discount of 14% on the marked price. Find the cost price (to the nearest rupee) of the treadmill.

- Ans
- ☒ 1. ₹845
  - ☒ 2. ₹840
  - ☒ 3. ₹1,043
  - ☒ 4. ₹943

Question ID : 264330104352

Option 1 ID : 264330409711

Option 2 ID : 264330409712

Option 3 ID : 264330409709

Option 4 ID : 264330409710

Status : Answered

Chosen Option : 4

Q.31 Jeevan can do a piece of work alone in 42 days, while Rishi and Jeevan together can do the same piece of work in 27 days. How many days will Rishi take to complete the same piece of work alone?

- Ans
- ☒ 1.  $74\frac{3}{5}$
  - ☒ 2.  $75\frac{1}{5}$
  - ☒ 3.  $75\frac{4}{5}$
  - ☒ 4.  $75\frac{3}{5}$

Question ID : 264330103285

Option 1 ID : 264330405445

Option 2 ID : 264330405446

Option 3 ID : 264330405448

Option 4 ID : 264330405447

Status : Answered

Chosen Option : 4

Q.32 A person covers 28 km while walking at a speed of 8 km/h. How much distance (in km) will he cover in same time if he walks at a speed of 6 km/h?

- Ans
- ☒ 1. 36
  - ☒ 2. 28
  - ☒ 3. 32
  - ☒ 4. 21

Question ID : 264330121721

Option 1 ID : 264330477058

Option 2 ID : 264330477056

Option 3 ID : 264330477057

Option 4 ID : 264330477055

Status : Answered

Chosen Option : 4

Q.33 The area of an equilateral triangle is  $173.2 \text{ cm}^2$ . Its side will be \_\_\_\_\_.

- Ans ☒ 1. 20 cm  
☐ 2. 22 cm  
☐ 3. 17.32 cm  
☐ 4. 21.32 cm

Question ID : 264330145121

Option 1 ID : 264330568740

Option 2 ID : 264330568742

Option 3 ID : 264330568739

Option 4 ID : 264330568741

Status : Not Attempted and  
Marked For Review

Chosen Option : --

Q.34 In two circles centred at O and O', the distance between the centres of both circles is 17 cm. The points of contact of a direct common tangent between the circles are P and Q. If the radii of both circles are 7 cm and 15 cm, respectively, then the length of PQ is equal to:

- Ans ☒ 1. 15 cm  
☐ 2. 17 cm  
☐ 3. 10 cm  
☐ 4. 22 cm

Question ID : 264330165495

Option 1 ID : 264330649061

Option 2 ID : 264330649062

Option 3 ID : 264330649059

Option 4 ID : 264330649060

Status : Answered

Chosen Option : 1

Q.35 If 4 men or 6 boys can finish a piece of work in 20 days, then in how many days can 6 men and 11 boys finish the same work?

- Ans ☐ 1. 5  
☒ 2. 6  
☐ 3. 7  
☐ 4. 8

Question ID : 26433082416

Option 1 ID : 264330323497

Option 2 ID : 264330323498

Option 3 ID : 264330323499

Option 4 ID : 264330323500

Status : Answered

Chosen Option : 2

Q.36 Aditya sold article X at a profit of 23% and article Y at a loss of 13%. He earned a profit of ₹180 in the entire transaction. If article X costs ₹90 less than article Y, then what is the price of article Y (in ₹)?

- Ans ☒ 1. 2,100  
☒ 2. 2,007  
☒ 3. 2,020  
☒ 4. 2,050

Question ID : 264330131520

Option 1 ID : 264330515186

Option 2 ID : 264330515183

Option 3 ID : 264330515184

Option 4 ID : 264330515185

Status : Not Attempted and Marked For Review

Chosen Option : --

Q.37 If  $\sin 2A = \cos 15^\circ$ , then the smallest positive value of A is:

- Ans ☒ 1.  $75^\circ$   
☒ 2.  $37.5^\circ$   
☒ 3.  $7.5^\circ$   
☒ 4.  $47.5^\circ$

Question ID : 264330157745

Option 1 ID : 264330618340

Option 2 ID : 264330618339

Option 3 ID : 264330618342

Option 4 ID : 264330618341

Status : Answered

Chosen Option : 2

Q.38 In an election, Ajay and Mohan are contesting for the Secretary post in a trade union of 9000 workers. 80% of the workers cast their votes, out of which 20% votes were found invalid. Ajay defeated Mohan by 1152 votes. How many votes did Ajay get?

- Ans ☒ 1. 3456  
☒ 2. 2304  
☒ 3. 4480  
☒ 4. 3546

Question ID : 264330103312

Option 1 ID : 264330405553

Option 2 ID : 264330405555

Option 3 ID : 264330405556

Option 4 ID : 264330405554

Status : Not Attempted and Marked For Review

Chosen Option : --

Q.39 Find the third proportional to 16 and 20.

- Ans ☒ 1. 25  
☐ 2. 23  
☐ 3. 24  
☐ 4. 26

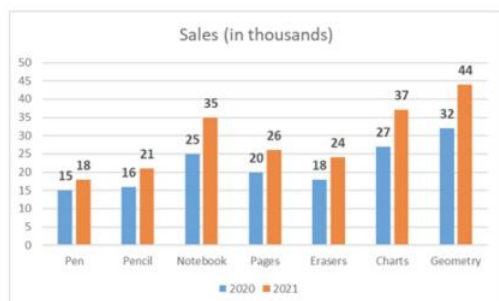
Question ID : 264330145046  
Option 1 ID : 264330568441  
Option 2 ID : 264330568439  
Option 3 ID : 264330568440  
Option 4 ID : 264330568442  
Status : Answered  
Chosen Option : 1

Q.40 The area of a sector of a circle of radius 8 cm, formed by an arc of length 4.6 cm, is

- Ans ☐ 1.  $6.3 \text{ cm}^2$   
☐ 2.  $9.2 \text{ cm}^2$   
☒ 3.  $18.4 \text{ cm}^2$   
☐ 4.  $12.6 \text{ cm}^2$

Question ID : 264330165440  
Option 1 ID : 264330648842  
Option 2 ID : 264330648839  
Option 3 ID : 264330648840  
Option 4 ID : 264330648841  
Status : Not Attempted and Marked For Review  
Chosen Option : --

Q.41 Following is the figure showing the sales of different items of a stationery shop. Which product recorded the highest percentage change from 2020 to 2021?



- Ans ☐ 1. Geometry  
☒ 2. Notebook  
☐ 3. Charts  
☐ 4. Pages

Question ID : 26433081649  
Option 1 ID : 264330320431  
Option 2 ID : 264330320429  
Option 3 ID : 264330320430  
Option 4 ID : 264330320432  
Status : Not Attempted and Marked For Review  
Chosen Option : --

**Q.42** A solid sphere made of wax of radius 12 cm is melted and cast into solid hemispheres of radius 4 cm each. Find the number of such solid hemispheres.

Ans ☒ 1. 54

☐ 2. 27

☐ 3. 14

☐ 4. 28

Question ID : 264330145107

Option 1 ID : 264330568685

Option 2 ID : 264330568683

Option 3 ID : 264330568684

Option 4 ID : 264330568686

Status : Not Attempted and  
Marked For Review

Chosen Option : --

**Q.43** The curved surface area (CSA) and the total surface area (TSA) of a hemisphere whose radius is 7 cm are:

Ans ☐ 1. CSA – 350 cm<sup>2</sup>; TSA – 500 cm<sup>2</sup>

☐ 2. CSA – 320 cm<sup>2</sup>; TSA – 480 cm<sup>2</sup>

☐ 3. CSA – 412 cm<sup>2</sup>; TSA – 544 cm<sup>2</sup>

☒ 4. CSA – 308 cm<sup>2</sup>; TSA – 462 cm<sup>2</sup>

Question ID : 264330103750

Option 1 ID : 264330407307

Option 2 ID : 264330407306

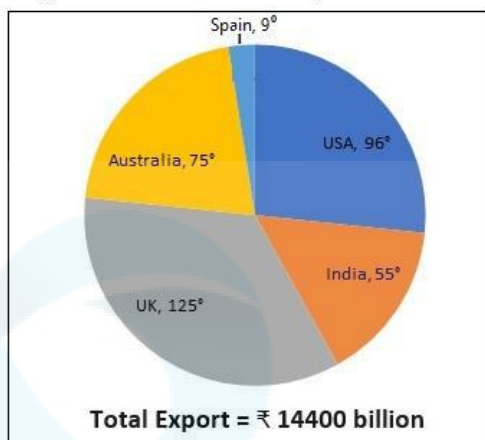
Option 3 ID : 264330407308

Option 4 ID : 264330407305

Status : Not Attempted and  
Marked For Review

Chosen Option : --

**Q.44** Study the given pie-chart and answer the question that follows.  
The pie-chart is about Country-wise Global Exports Presentation.



By how much does the value of the exports of UK exceed that of Australia (in ₹ billion)?

- Ans** ☒ 1. 1,500  
☒ 2. 2,000  
☒ 3. 1,440  
☒ 4. 2,550

Question ID : 264330158280

Option 1 ID : 264330620480

Option 2 ID : 264330620481

Option 3 ID : 264330620479

Option 4 ID : 264330620482

Status : Not Attempted and  
Marked For Review

Chosen Option : --

**Q.45** If the radius of a sphere is doubled, then its surface area will be increased by:

- Ans** ☒ 1. 100%  
☒ 2. 200%  
☒ 3. 300%  
☒ 4. 400%

Question ID : 264330104213

Option 1 ID : 264330409153

Option 2 ID : 264330409154

Option 3 ID : 264330409155

Option 4 ID : 264330409156

Status : Answered

Chosen Option : 4



Q.46 Study the given table and answer the question that follows.

The table shows the number of pages printed by four printers in three days.

Days	Printers			
	A	B	C	D
Friday	350	451	412	206
Saturday	420	325	365	251
Sunday	238	198	258	326

What is the respective ratio between total number of pages printed by printer D on Friday and Sunday together and total number of pages printed by printer A on Friday and Saturday together?

- Ans
- ☒ 1. 34 : 51
  - ☒ 2. 38 : 55
  - ☒ 3. 51 : 34
  - ☒ 4. 55 : 38

Question ID : 264330158263

Option 1 ID : 264330620413

Option 2 ID : 264330620412

Option 3 ID : 264330620414

Option 4 ID : 264330620411

Status : Answered

Chosen Option : 1

Q.47 Find the third proportional to 23 and 31.

- Ans
- ☒ 1.  $\frac{31}{23}$
  - ☒ 2.  $\frac{961}{23}$
  - ☒ 3.  $\frac{23}{31}$
  - ☒ 4.  $\frac{23}{961}$

Question ID : 264330103972

Option 1 ID : 264330408191

Option 2 ID : 264330408192

Option 3 ID : 264330408190

Option 4 ID : 264330408189

Status : Answered

Chosen Option : 2

**Q.48** A speedboat, whose speed in 20 km/h in still water, goes 35 km downstream and comes back in a total of 8 hours. What is the speed of the stream?

- Ans
- ☒ 1. 20 km/h
  - ☒ 2. 10 km/h
  - ☒ 3. 15 km/h
  - ☒ 4. 5 km/h

Question ID : 264330103744

Option 1 ID : 264330407284

Option 2 ID : 264330407282

Option 3 ID : 264330407283

Option 4 ID : 264330407281

Status : **Not Attempted and  
Marked For Review**

Chosen Option : --

**Q.49** What is the HCF of 12, 18 and 42?

- Ans
- ☒ 1. 123
  - ☒ 2. 12
  - ☒ 3. 6
  - ☒ 4. 60

Question ID : 264330145080

Option 1 ID : 264330568578

Option 2 ID : 264330568576

Option 3 ID : 264330568575

Option 4 ID : 264330568577

Status : **Answered**

Chosen Option : 3

**Q.50** If 60 litres of a milk solution has 40% milk in it, then how much milk should be added to make the milk 60% in the solution?

- Ans
- ☒ 1. 30 litres
  - ☒ 2. 25 litres
  - ☒ 3. 20 litres
  - ☒ 4. 35 litres

Question ID : 264330104487

Option 1 ID : 264330410250

Option 2 ID : 264330410251

Option 3 ID : 264330410249

Option 4 ID : 264330410252

Status : **Not Answered**

Chosen Option : --

Section : **English Comprehension**

**Q.1** Select the most appropriate option that can substitute the underlined idiom/phrase in the given sentence.  
You cannot throw dust into my eyes.

- Ans**   ☒ 1. terrify me  
         ☒ 2. hurt me  
         ☒ 3. abuse me  
         ☒ 4. mislead or deceive me

Question ID : 264330117252  
Option 1 ID : 264330461067  
Option 2 ID : 264330461065  
Option 3 ID : 264330461066  
Option 4 ID : 264330461068  
Status : Answered  
Chosen Option : 4

**Q.2** Select the most appropriate option that can substitute the underlined segment in the given sentence.

O' Henry's short stories are read all over the world till now because they are pithy.

- Ans**   ☒ 1. fascinating and lengthy  
         ☒ 2. elusive and unreal  
         ☒ 3. exaggerated yet short  
         ☒ 4. concise and expressive

Question ID : 26433099879  
Option 1 ID : 264330392107  
Option 2 ID : 264330392105  
Option 3 ID : 264330392106  
Option 4 ID : 264330392108  
Status : Answered  
Chosen Option : 4

**Q.3** Select the most appropriate meaning of the given idiom.  
A plum job

- Ans**   ☒ 1. An easy and pleasant job  
         ☒ 2. A rare job  
         ☒ 3. A difficult job  
         ☒ 4. A job involving extensive travelling

Question ID : 264330134218  
Option 1 ID : 264330525868  
Option 2 ID : 264330525867  
Option 3 ID : 264330525869  
Option 4 ID : 264330525870  
Status : Answered  
Chosen Option : 1

**Q.4** Select the most appropriate option that can substitute the underlined segment in the given sentence. If there is no need to substitute it, select 'No substitution'.  
I like to read books, but my brother prefers to watching movies.

- Ans** ☒ 1. in watching  
☒ 2. to watch  
☒ 3. on watching  
☒ 4. No substitution

Question ID : 264330137493  
Option 1 ID : 264330538593  
Option 2 ID : 264330538591  
Option 3 ID : 264330538592  
Option 4 ID : 264330538594  
Status : Answered  
Chosen Option : 2

**Q.5** Select the most appropriate ANTONYM of the given word.  
Glad

- Ans** ☒ 1. Keen  
☒ 2. Loyal  
☒ 3. Sad  
☒ 4. Pleased

Question ID : 264330164170  
Option 1 ID : 264330643933  
Option 2 ID : 264330643934  
Option 3 ID : 264330643932  
Option 4 ID : 264330643931  
Status : Answered  
Chosen Option : 3

**Q.6** The following sentence has been split into four segments. Identify the segment that contains a grammatical error.

There is a spectrum / of seas around that / land which attracts / tourists of all aging.

- Ans** ☒ 1. tourists of all aging.  
☒ 2. There is a spectrum  
☒ 3. land which attracts  
☒ 4. of seas around that

Question ID : 26433091958  
Option 1 ID : 264330361172  
Option 2 ID : 264330361169  
Option 3 ID : 264330361171  
Option 4 ID : 264330361170  
Status : Answered  
Chosen Option : 1

Q.7 Select the most appropriate meaning of the underlined word.  
Saurabh imitates his boss perfectly.

- Ans
- ☒ 1. Admires
  - ☒ 2. Worships
  - ☒ 3. Copies
  - ☒ 4. Hates

Question ID : 264330121039  
Option 1 ID : 264330474363  
Option 2 ID : 264330474365  
Option 3 ID : 264330474364  
Option 4 ID : 264330474366  
Status : Answered  
Chosen Option : 4

Q.8 Select the most appropriate synonym of the given word.  
Unequivocal

- Ans
- ☒ 1. Complete
  - ☒ 2. Articulate
  - ☒ 3. Unambiguous
  - ☒ 4. Doubted

Question ID : 26433099853  
Option 1 ID : 264330392010  
Option 2 ID : 264330392012  
Option 3 ID : 264330392009  
Option 4 ID : 264330392011  
Status : Answered  
Chosen Option : 4

Q.9 In the following sentence, four words are underlined, out of which one word is incorrectly spelt. Identify the INCORRECTLY spelt word.  
Traffic accidents are increasing steadily, and large cities are plaged by traffic congestion. Worst of all is the air pollution caused by internal combustion engine, uninterruptedly.

- Ans
- ☒ 1. plaged
  - ☒ 2. uninterruptedly
  - ☒ 3. congestion
  - ☒ 4. combustion

Question ID : 264330132619  
Option 1 ID : 264330519571  
Option 2 ID : 264330519574  
Option 3 ID : 264330519572  
Option 4 ID : 264330519573  
Status : Answered  
Chosen Option : 1

Q.10 Select the most appropriate meaning of the given idiom.  
Keep count of

- Ans ☒ 1. To remind of a deadline  
☒ 2. To act more politely  
☒ 3. To remember a total  
☒ 4. To accept an invitation

Question ID : 26433099653  
Option 1 ID : 264330391219  
Option 2 ID : 264330391218  
Option 3 ID : 264330391217  
Option 4 ID : 264330391220  
Status : Answered  
Chosen Option : 4

Q.11 Select the most appropriate one-word substitution of the given group of words.

A pretence of having a virtuous character, moral or religious beliefs or principles, etc.,  
that one does not really possess.

- Ans ☒ 1. Shrewdness  
☒ 2. Naivety  
☒ 3. Gullibility  
☒ 4. Hypocrisy

Question ID : 26433090854  
Option 1 ID : 264330356825  
Option 2 ID : 264330356828  
Option 3 ID : 264330356827  
Option 4 ID : 264330356826  
Status : Answered  
Chosen Option : 4

Q.12 Select the most appropriate idiom that can substitute the underlined segment in the  
given sentence.

He made a mess of that bookcase he was supposed to be repairing.

- Ans ☒ 1. made a pig's ear  
☒ 2. had a butcher hook  
☒ 3. made a clean breast  
☒ 4. brought a dog's breast

Question ID : 264330164573  
Option 1 ID : 264330645480  
Option 2 ID : 264330645479  
Option 3 ID : 264330645482  
Option 4 ID : 264330645481  
Status : Not Attempted and  
Marked For Review  
Chosen Option : --

**Q.13** The following sentence has been split into four segments. Identify the segment that contains a grammatical error.  
My apartment / in Delhi / is situated / on second floor.

- Ans ☒ 1. is situated  
☒ 2. in Delhi  
☒ 3. My apartment  
☒ 4. on second floor

Question ID : 264330120572  
Option 1 ID : 264330472532  
Option 2 ID : 264330472534  
Option 3 ID : 264330472531  
Option 4 ID : 264330472533  
Status : Answered  
Chosen Option : 4

**Q.14** Select the most appropriate option that can substitute the underlined segment in the given sentence. If there is no need to substitute it, select 'No substitution'.

This case is serious. You need to look into this matter; otherwise, the situation will get out of control soon.

- Ans ☒ 1. look up  
☒ 2. look at  
☒ 3. No substitution  
☒ 4. look after

Question ID : 26433072295  
Option 1 ID : 264330283485  
Option 2 ID : 264330283484  
Option 3 ID : 264330283487  
Option 4 ID : 264330283486  
Status : Answered  
Chosen Option : 3

**Q.15** Select the most appropriate meaning of the given idiom.  
Keep a straight face

- Ans ☒ 1. Become very confused  
☒ 2. Get on extremely well with someone  
☒ 3. Not laugh or change your expression even though you want to laugh  
☒ 4. Make more of an effort

Question ID : 264330135997  
Option 1 ID : 264330532829  
Option 2 ID : 264330532828  
Option 3 ID : 264330532830  
Option 4 ID : 264330532827  
Status : Answered  
Chosen Option : 1

**Q.16** Select the option that can be used as a one-word substitute for the given group of words.

Huge fire for celebration

- Ans ☒ 1. Campaign  
☒ 2. Bonfire  
☒ 3. Agenda  
☒ 4. Crossfire

Question ID : 26433088756  
Option 1 ID : 264330348578  
Option 2 ID : 264330348577  
Option 3 ID : 264330348580  
Option 4 ID : 264330348579  
Status : Answered  
Chosen Option : 2

**Q.17** Identify the option that rectifies the spelling of the incorrectly spelt word in the given sentence.

The disadvantages of listening to music at a loud volume include loss of hearing.

- Ans ☒ 1. Lissening  
☒ 2. Lose  
☒ 3. Heering  
☒ 4. Volume

Question ID : 26433089016  
Option 1 ID : 264330349601  
Option 2 ID : 264330349602  
Option 3 ID : 264330349604  
Option 4 ID : 264330349603  
Status : Answered  
Chosen Option : 3

**Q.18** Select the most appropriate synonym of the word 'disclosed' in the given sentence and choose the correct option.

The linguist's analysis of the language revealed patterns and structures that were previously unknown.

- Ans ☒ 1. Linguist  
☒ 2. Patterns  
☒ 3. Revealed  
☒ 4. Unknown

Question ID : 264330163536  
Option 1 ID : 264330641399  
Option 2 ID : 264330641401  
Option 3 ID : 264330641400  
Option 4 ID : 264330641402  
Status : Answered  
Chosen Option : 3



Q.19 Select the INCORRECTLY spelt word.

- Ans    ✓ 1. Glidder  
         ✗ 2. Airplane  
         ✗ 3. Helicopter  
         ✗ 4. Ladybug

Question ID : 26433089011  
Option 1 ID : 264330349582  
Option 2 ID : 264330349581  
Option 3 ID : 264330349583  
Option 4 ID : 264330349584  
Status : Answered  
Chosen Option : 1

Q.20 Select the most appropriate meaning of the underlined word.  
We shouldn't blame or envy anyone.

- Ans    ✗ 1. Love  
         ✓ 2. Jealousy  
         ✗ 3. Curse  
         ✗ 4. Reap

Question ID : 264330121038  
Option 1 ID : 264330474361  
Option 2 ID : 264330474362  
Option 3 ID : 264330474360  
Option 4 ID : 264330474359  
Status : Answered  
Chosen Option : 3

Q.21 Select the option that can be used as a one-word substitute for the given group of words.

Minimum people needed for a meeting

- Ans    ✗ 1. Forum  
         ✓ 2. Quorum  
         ✗ 3. Addendum  
         ✗ 4. Decorum

Question ID : 26433073673  
Option 1 ID : 264330288833  
Option 2 ID : 264330288835  
Option 3 ID : 264330288834  
Option 4 ID : 264330288832  
Status : Answered  
Chosen Option : 1

**Q.22** Select the option that can be used as a one-word substitute for the given group of words.

Detailed list of goods dispatched with quantity and price to the purchaser.

- Ans
- ☒ 1. Ledger
  - ☒ 2. Sales
  - ☒ 3. Receipt
  - ☒ 4. Invoice

Question ID : 26433088807  
Option 1 ID : 264330348783  
Option 2 ID : 264330348784  
Option 3 ID : 264330348782  
Option 4 ID : 264330348781

Status : Answered

Chosen Option : 4

**Q.23** Select the grammatically correct sentence.

- Ans
- ☒ 1. The simple mistake which was committed by the boy haunted her for years.
  - ☒ 2. An simple mistake which was committed by the boy haunted her for years.
  - ☒ 3. A simple mistake which was committed by an boy haunted her for years.
  - ☒ 4. The simple mistake which was committed by an boy haunted her for years.

Question ID : 264330117215  
Option 1 ID : 264330460924  
Option 2 ID : 264330460921  
Option 3 ID : 264330460923  
Option 4 ID : 264330460922

Status : Answered

Chosen Option : 1

**Q.24** Select the most appropriate synonym of the given word.

Vulnerable

- Ans
- ☒ 1. Susceptible
  - ☒ 2. Guarded
  - ☒ 3. Amiable
  - ☒ 4. Delectable

Question ID : 264330163394  
Option 1 ID : 264330640857  
Option 2 ID : 264330640858  
Option 3 ID : 264330640855  
Option 4 ID : 264330640856

Status : Answered

Chosen Option : 1

Q.25 Select the most appropriate synonym of the given word.

Benevolent

Ans ☒ 1. Generous

☐ 2. Innocent

☐ 3. Cruel

☐ 4. Wicked

Question ID : 264330163357

Option 1 ID : 264330640719

Option 2 ID : 264330640721

Option 3 ID : 264330640722

Option 4 ID : 264330640720

Status : Answered

Chosen Option : 1

Q.26 In the following sentence, four words are underlined, out of which one word is incorrectly spelt. Identify the INCORRECTLY spelt word.

The ruins of many structures that still stand tall in their granduer are testimony to the fact that Mewar was not only the land of the courageous .

Ans ☐ 1. testimony

☐ 2. courageous

☒ 3. granduer

☐ 4. ruins

Question ID : 264330123786

Option 1 ID : 264330485082

Option 2 ID : 264330485083

Option 3 ID : 264330485081

Option 4 ID : 264330485080

Status : Answered

Chosen Option : 3

Q.27 Select the option that can be used as a one-word substitute for the given group of words.

To criticise someone severely

Ans ☐ 1. Rate

☐ 2. Remonstrate

☒ 3. Chastise

☐ 4. Scoff

Question ID : 26433088441

Option 1 ID : 264330347351

Option 2 ID : 264330347349

Option 3 ID : 264330347350

Option 4 ID : 264330347352

Status : Answered

Chosen Option : 4

**Q.28** Select the most appropriate one-word substitution of the given group of words.

**A state of intense happiness and self-confidence.**

- Ans**    ☒ 1. Euphoria  
          ☒ 2. Intoxication  
          ☒ 3. Touché  
          ☒ 4. Oblivion

Question ID : 26433090855  
Option 1 ID : 264330356832  
Option 2 ID : 264330356830  
Option 3 ID : 264330356829  
Option 4 ID : 264330356831  
Status : Answered  
Chosen Option : 1

**Q.29** Select the option that can be used as a one-word substitute for the given group of words.

**To make a low continuous vibratory sound expressing contentment (of a cat).**

- Ans**    ☒ 1. To meow  
          ☒ 2. To purr  
          ☒ 3. To buzz  
          ☒ 4. To roar

Question ID : 26433088972  
Option 1 ID : 264330349428  
Option 2 ID : 264330349427  
Option 3 ID : 264330349425  
Option 4 ID : 264330349426  
Status : Answered  
Chosen Option : 1

**Q.30** Select the most appropriate meaning of the given idiom.

**Face the music**

- Ans**    ☒ 1. To work every possible way to succeed  
          ☒ 2. To accept punishment for some mistake which you have done  
          ☒ 3. To be cheated by someone you trust  
          ☒ 4. To have the problems with money

Question ID : 26433092077  
Option 1 ID : 264330361632  
Option 2 ID : 264330361629  
Option 3 ID : 264330361631  
Option 4 ID : 264330361630  
Status : Answered  
Chosen Option : 2

Q.31 Select the most appropriate idiom to fill in the blank.

I was going to mention it, but it \_\_\_\_\_.

- Ans ☒ 1. brought to mind  
☒ 2. changed my mind  
☒ 3. bore in mind  
☒ 4. slipped my mind

Question ID : 264330163336  
Option 1 ID : 264330640643  
Option 2 ID : 264330640646  
Option 3 ID : 264330640645  
Option 4 ID : 264330640644  
Status : Answered  
Chosen Option : 4

Q.32 Select the most appropriate phrasal verb to fill in the blank.  
Though Pradeep \_\_\_\_\_ for Jamaica, he landed up in Nigeria.

- Ans ☒ 1. set aside  
☒ 2. set about  
☒ 3. set out  
☒ 4. set up

Question ID : 26433084919  
Option 1 ID : 264330333400  
Option 2 ID : 264330333398  
Option 3 ID : 264330333399  
Option 4 ID : 264330333397  
Status : Answered  
Chosen Option : 3

Q.33 Select the most appropriate ANTONYM of the given word.  
Specific

- Ans ☒ 1. Topple  
☒ 2. Lawful  
☒ 3. Random  
☒ 4. Stroll

Question ID : 264330164273  
Option 1 ID : 264330644317  
Option 2 ID : 264330644318  
Option 3 ID : 264330644315  
Option 4 ID : 264330644316  
Status : Answered  
Chosen Option : 3

Q.34 Select the most appropriate ANTONYM of the given word.

Beneficent

- Ans ☒ 1. Cruel  
☐ 2. Lethargic  
☐ 3. Soft  
☐ 4. Friendly

Question ID : 264330163396  
Option 1 ID : 264330640864  
Option 2 ID : 264330640866  
Option 3 ID : 264330640863  
Option 4 ID : 264330640865  
Status : Answered  
Chosen Option : 1

Q.35 Select the most appropriate meaning of the given idiom.

Grasping at straws

- Ans ☐ 1. Trying to find the best way to compete with others when nothing you choose is likely to work  
☐ 2. Trying to find some way to succeed when you see others are also doing the same  
☒ 3. Trying to find some way to succeed when nothing you choose is likely to work  
☐ 4. Trying to find manipulative ways to succeed

Question ID : 264330163431  
Option 1 ID : 264330641001  
Option 2 ID : 264330640999  
Option 3 ID : 264330641002  
Option 4 ID : 264330641000  
Status : Not Attempted and Marked For Review  
Chosen Option : --

Q.36 Select the most appropriate ANTONYM of the given word.

Contempt

- Ans ☐ 1. Mockery  
☐ 2. Deny  
☒ 3. Regard  
☐ 4. Immoral

Question ID : 264330163362  
Option 1 ID : 264330640740  
Option 2 ID : 264330640741  
Option 3 ID : 264330640742  
Option 4 ID : 264330640739  
Status : Answered  
Chosen Option : 3

Q.37 Select the option that can be used as a one-word substitute for the given group of words.

No longer used because something new has been invented

- Ans ☒ 1. Classic  
☒ 2. Ancient  
☒ 3. Ornamental  
☒ 4. Obsolete

Question ID : 26433088196  
Option 1 ID : 264330346378  
Option 2 ID : 264330346380  
Option 3 ID : 264330346379  
Option 4 ID : 264330346377  
Status : Answered  
Chosen Option : 4

Q.38 Select the most appropriate idiom or phrase to complete the given sentence.

I like her because she never likes to make \_\_\_\_\_.

- Ans ☒ 1. a slap on the wrist  
☒ 2. a drop in the bucket  
☒ 3. a bed of roses  
☒ 4. a quick buck

Question ID : 26433099136  
Option 1 ID : 264330389159  
Option 2 ID : 264330389157  
Option 3 ID : 264330389158  
Option 4 ID : 264330389160  
Status : Not Attempted and Marked For Review  
Chosen Option : --

Q.39 Select the sentence that has a spelling error.

- A- A fisherman, enfeebled with age, could no longer go out to sea so he began fishing in the river.  
B- Every morning he would go down to the river and sit there fishing the whole day long.  
C- In the evening, he would sell whatever he had caught, buy food for himself and go home.  
D- One hot afternoon, while he was bemoaning his fate, a large bird alited near him.

- Ans ☒ 1. One hot afternoon, while he was bemoaning his fate, a large bird alited near him.  
☒ 2. In the evening, he would sell whatever he had caught, buy food for himself and go home.  
☒ 3. A fisherman, enfeebled with age, could no longer go out to sea so he began fishing in the river.  
☒ 4. Every morning he would go down to the river and sit there fishing the whole day long.

Question ID : 264330141563  
Option 1 ID : 264330554590  
Option 2 ID : 264330554589  
Option 3 ID : 264330554587  
Option 4 ID : 264330554588  
Status : Answered  
Chosen Option : 3

**Q.40** Choose the most appropriate meaning of the underlined phrase.  
Ram could not go to Delhi for vacation since he was banking on his arrears of pay which he did not get in time

- Ans**
- ☒ 1. Sloping on
  - ☒ 2. Depending on his bank
  - ☒ 3. Calling on
  - ☒ 4. Relying on

Question ID : 264330137453

Option 1 ID : 264330538435

Option 2 ID : 264330538437

Option 3 ID : 264330538436

Option 4 ID : 264330538438

Status : **Not Attempted and  
Marked For Review**

Chosen Option : --

**Comprehension:**

In the following passage, some words have been deleted. Read the passage carefully and select the most appropriate option to fill in each blank.

When another old cave is discovered in the south of France, it is not (1)\_\_\_\_\_ in news. Rather, it is an ordinary event. Such discoveries are so (2)\_\_\_\_\_ these days that hardly anybody pays heed to them. However, when the Lascaux cave complex was discovered in 1940, the world was (3)\_\_\_\_\_. Painted directly on its walls were hundreds of scenes showing how people lived thousands of years ago. The scenes show people hunting animals, such as bison or wild cats. Other images (4)\_\_\_\_\_ birds and, most noticeably, horses, which appear in more than 300 wall images, by far (5)\_\_\_\_\_ all other animals.

**SubQuestion No : 41**

**Q.41** Select the most appropriate option to fill in blank number 1.

- Ans**
- ☒ 1. suitably
  - ☒ 2. nearly
  - ☒ 3. merrily
  - ☒ 4. usually

Question ID : 264330163292

Option 1 ID : 264330640467

Option 2 ID : 264330640469

Option 3 ID : 264330640468

Option 4 ID : 264330640470

Status : **Answered**

Chosen Option : 4



Comprehension:

In the following passage, some words have been deleted. Read the passage carefully and select the most appropriate option to fill in each blank.  
When another old cave is discovered in the south of France, it is not (1)\_\_\_\_\_ in news. Rather, it is an ordinary event. Such discoveries are so (2)\_\_\_\_\_ these days that hardly anybody pays heed to them. However, when the Lascaux cave complex was discovered in 1940, the world was (3)\_\_\_\_\_. Painted directly on its walls were hundreds of scenes showing how people lived thousands of years ago. The scenes show people hunting animals, such as bison or wild cats. Other images (4)\_\_\_\_\_ birds and, most noticeably, horses, which appear in more than 300 wall images, by far (5)\_\_\_\_\_ all other animals.

SubQuestion No : 42

Q.42 Select the most appropriate option to fill in blank number 2.

- Ans
- ☒ 1. disorderly
  - ☒ 2. frequent
  - ☒ 3. ghastly
  - ☒ 4. delusional

Question ID : 264330163293  
Option 1 ID : 264330640471  
Option 2 ID : 264330640472  
Option 3 ID : 264330640474  
Option 4 ID : 264330640473  
Status : Answered  
Chosen Option : 3

Comprehension:

In the following passage, some words have been deleted. Read the passage carefully and select the most appropriate option to fill in each blank.  
When another old cave is discovered in the south of France, it is not (1)\_\_\_\_\_ in news. Rather, it is an ordinary event. Such discoveries are so (2)\_\_\_\_\_ these days that hardly anybody pays heed to them. However, when the Lascaux cave complex was discovered in 1940, the world was (3)\_\_\_\_\_. Painted directly on its walls were hundreds of scenes showing how people lived thousands of years ago. The scenes show people hunting animals, such as bison or wild cats. Other images (4)\_\_\_\_\_ birds and, most noticeably, horses, which appear in more than 300 wall images, by far (5)\_\_\_\_\_ all other animals.

SubQuestion No : 43

Q.43 Select the most appropriate option to fill in blank number 3.

- Ans
- ☒ 1. baffled
  - ☒ 2. overthrown
  - ☒ 3. encouraged
  - ☒ 4. crushed

Question ID : 264330163294  
Option 1 ID : 264330640475  
Option 2 ID : 264330640476  
Option 3 ID : 264330640477  
Option 4 ID : 264330640478  
Status : Answered  
Chosen Option : 1

Comprehension:

In the following passage, some words have been deleted. Read the passage carefully and select the most appropriate option to fill in each blank.  
When another old cave is discovered in the south of France, it is not (1)\_\_\_\_\_ in news. Rather, it is an ordinary event. Such discoveries are so (2)\_\_\_\_\_ these days that hardly anybody pays heed to them. However, when the Lascaux cave complex was discovered in 1940, the world was (3)\_\_\_\_\_. Painted directly on its walls were hundreds of scenes showing how people lived thousands of years ago. The scenes show people hunting animals, such as bison or wild cats. Other images (4)\_\_\_\_\_ birds and, most noticeably, horses, which appear in more than 300 wall images, by far (5)\_\_\_\_\_ all other animals.

SubQuestion No : 44

Q.44 Select the most appropriate option to fill in blank number 4.

- Ans
- ☒ 1. imprint
  - ☒ 2. depict
  - ☐ 3. require
  - ☐ 4. determine

Question ID : 264330163295  
Option 1 ID : 264330640482  
Option 2 ID : 264330640481  
Option 3 ID : 264330640479  
Option 4 ID : 264330640480  
Status : Answered  
Chosen Option : 2

Comprehension:

In the following passage, some words have been deleted. Read the passage carefully and select the most appropriate option to fill in each blank.  
When another old cave is discovered in the south of France, it is not (1)\_\_\_\_\_ in news. Rather, it is an ordinary event. Such discoveries are so (2)\_\_\_\_\_ these days that hardly anybody pays heed to them. However, when the Lascaux cave complex was discovered in 1940, the world was (3)\_\_\_\_\_. Painted directly on its walls were hundreds of scenes showing how people lived thousands of years ago. The scenes show people hunting animals, such as bison or wild cats. Other images (4)\_\_\_\_\_ birds and, most noticeably, horses, which appear in more than 300 wall images, by far (5)\_\_\_\_\_ all other animals.

SubQuestion No : 45

Q.45 Select the most appropriate option to fill in blank number 5.

- Ans
- ☒ 1. outnumbering
  - ☐ 2. outsourcing
  - ☐ 3. outlasting
  - ☐ 4. outreaching

Question ID : 264330163296  
Option 1 ID : 264330640486  
Option 2 ID : 264330640483  
Option 3 ID : 264330640485  
Option 4 ID : 264330640484  
Status : Not Attempted and Marked For Review  
Chosen Option : --

Comprehension:

Read the given passage and answer the questions that follow.

Climate policy must now put health at the centre and promote climate change mitigation policies that bring health benefits simultaneously. Health-focused climate policy would help bring about a planet that has cleaner air, more abundant and safer freshwater and food, more effective and fairer health and social protection systems and, as a result, healthier people. Investment in clean energy will yield health gains that repay those investments twice over. There are proven interventions able to reduce emissions of short-lived climate pollutants, for instance applying higher standards for vehicle emissions, which have been calculated to save approximately 2.4 million lives per year, through improved air quality and reduce global warming by about 0.5°C by 2050. The cost of renewable sources of energy has decreased significantly in the last few years, and solar energy is now cheaper than coal or gas in most major economies.

SubQuestion No : 46

Q.46 What is the ANTONYM for the word ‘intervention’, from the passage?

- Ans
- ☒ 1. Specific
  - ☒ 2. Evidence
  - ☒ 3. Non-involvement
  - ☒ 4. Data

Question ID : 264330136030  
Option 1 ID : 264330532939  
Option 2 ID : 264330532942  
Option 3 ID : 264330532941  
Option 4 ID : 264330532940  
Status : Answered  
Chosen Option : 3

Comprehension:

Read the given passage and answer the questions that follow.

Climate policy must now put health at the centre and promote climate change mitigation policies that bring health benefits simultaneously. Health-focused climate policy would help bring about a planet that has cleaner air, more abundant and safer freshwater and food, more effective and fairer health and social protection systems and, as a result, healthier people. Investment in clean energy will yield health gains that repay those investments twice over. There are proven interventions able to reduce emissions of short-lived climate pollutants, for instance applying higher standards for vehicle emissions, which have been calculated to save approximately 2.4 million lives per year, through improved air quality and reduce global warming by about 0.5°C by 2050. The cost of renewable sources of energy has decreased significantly in the last few years, and solar energy is now cheaper than coal or gas in most major economies.

SubQuestion No : 47

Q.47 What is the ANTONYM for the word ‘promote’, from the passage?

- Ans
- ☒ 1. Conduct
  - ☒ 2. Obstruct
  - ☒ 3. Invade
  - ☒ 4. Exclude

Question ID : 264330136028  
Option 1 ID : 264330532932  
Option 2 ID : 264330532931  
Option 3 ID : 264330532933  
Option 4 ID : 264330532934  
Status : Answered  
Chosen Option : 2

Comprehension:

Read the given passage and answer the questions that follow.

Climate policy must now put health at the centre and promote climate change mitigation policies that bring health benefits simultaneously. Health-focused climate policy would help bring about a planet that has cleaner air, more abundant and safer freshwater and food, more effective and fairer health and social protection systems and, as a result, healthier people. Investment in clean energy will yield health gains that repay those investments twice over. There are proven interventions able to reduce emissions of short-lived climate pollutants, for instance applying higher standards for vehicle emissions, which have been calculated to save approximately 2.4 million lives per year, through improved air quality and reduce global warming by about 0.5°C by 2050. The cost of renewable sources of energy has decreased significantly in the last few years, and solar energy is now cheaper than coal or gas in most major economies.

SubQuestion No : 48

Q.48 Which of the following represents the structure of the passage?

- Ans
- ☒ 1. Chronology
  - ☒ 2. Critique
  - ☒ 3. Problem-solution
  - ☒ 4. Definition

Question ID : 264330136029  
Option 1 ID : 264330532936  
Option 2 ID : 264330532937  
Option 3 ID : 264330532938  
Option 4 ID : 264330532935  
Status : Answered  
Chosen Option : 3

Comprehension:

Read the given passage and answer the questions that follow.

Climate policy must now put health at the centre and promote climate change mitigation policies that bring health benefits simultaneously. Health-focused climate policy would help bring about a planet that has cleaner air, more abundant and safer freshwater and food, more effective and fairer health and social protection systems and, as a result, healthier people. Investment in clean energy will yield health gains that repay those investments twice over. There are proven interventions able to reduce emissions of short-lived climate pollutants, for instance applying higher standards for vehicle emissions, which have been calculated to save approximately 2.4 million lives per year, through improved air quality and reduce global warming by about 0.5°C by 2050. The cost of renewable sources of energy has decreased significantly in the last few years, and solar energy is now cheaper than coal or gas in most major economies.

SubQuestion No : 49

Q.49 Which of the following most accurately states the central idea of the passage?

- Ans
- ☒ 1. Greenhouse gases
  - ☒ 2. Pollution
  - ☒ 3. Climate policy for health
  - ☒ 4. Fossil fuels

Question ID : 264330136026  
Option 1 ID : 264330532924  
Option 2 ID : 264330532923  
Option 3 ID : 264330532925  
Option 4 ID : 264330532926  
Status : Answered  
Chosen Option : 2

**Comprehension:**

Read the given passage and answer the questions that follow.

Climate policy must now put health at the centre and promote climate change mitigation policies that bring health benefits simultaneously. Health-focused climate policy would help bring about a planet that has cleaner air, more abundant and safer freshwater and food, more effective and fairer health and social protection systems and, as a result, healthier people. Investment in clean energy will yield health gains that repay those investments twice over. There are proven interventions able to reduce emissions of short-lived climate pollutants, for instance applying higher standards for vehicle emissions, which have been calculated to save approximately 2.4 million lives per year, through improved air quality and reduce global warming by about 0.5°C by 2050. The cost of renewable sources of energy has decreased significantly in the last few years, and solar energy is now cheaper than coal or gas in most major economies.

**SubQuestion No : 50**

**Q.50 Which is the best description of the tone of the passage?**

- Ans
- ☒ 1. Biased
  - ☒ 2. Cynical
  - ☒ 3. Technical
  - ☒ 4. Humanistic

Question ID : 264330136027

Option 1 ID : 264330532927

Option 2 ID : 264330532928

Option 3 ID : 264330532929

Option 4 ID : 264330532930

Status : Answered

Chosen Option : 4