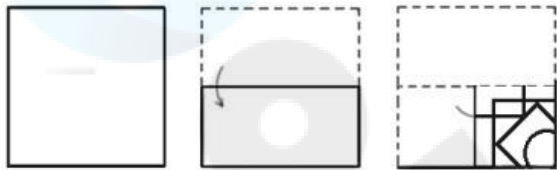


Sub Inspector in Delhi Police and Central Armed Police Forces Examination 2023  
Paper I

Roll Number	
Candidate Name	
Venue Name	
Exam Date	05/10/2023
Exam Time	4:00 PM - 6:00 PM
Subject	SICPO Paper I 2023

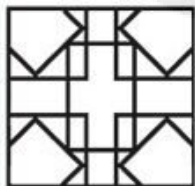
Section : General Intelligence and Reasoning

Q.1 A paper is folded and cut as shown. How will it appear when unfolded?



Ans

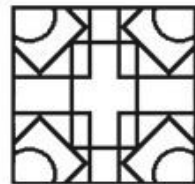
✗ 1.



✓ 2.



✗ 3.



✗ 4.



Question ID : 26433040798

Option 1 ID : 264330159669

Option 2 ID : 264330159667

Option 3 ID : 264330159668

Option 4 ID : 264330159670

Status : Answered

Chosen Option : 2

**Q.2** Select the set in which the numbers are related in the same way as are the numbers of the following sets.  
(NOTE : Operations should be performed on the whole numbers, without breaking down the numbers into its constituent digits. E.g. 13- Operations on 13 such as adding/subtracting/multiplying etc. to 13 can be performed. Breaking down 13 into 1 and 3 and then performing mathematical operations on 1 and 3 is not allowed.)  
(53, 36, 25)  
(71, 54, 43)

- Ans ☒ 1. (41, 23, 18)  
☒ 2. (99, 82, 71)  
☒ 3. (66, 53, 41)  
☒ 4. (32, 14, 7)

Question ID : 26433057459  
Option 1 ID : 264330224821  
Option 2 ID : 264330224822  
Option 3 ID : 264330224820  
Option 4 ID : 264330224823  
Status : Not Answered  
Chosen Option : --

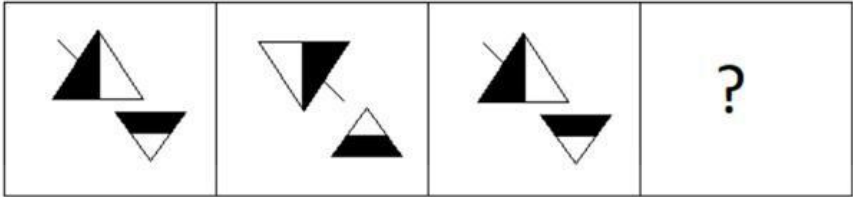
**Q.3** Six characters A, B, C, 1, 2 and 3 are written on different faces of a dice. Two positions of this dice are shown in the figure. Find the character on the face opposite to C.



- Ans ☒ 1. A  
☒ 2. 2  
☒ 3. 3  
☒ 4. B

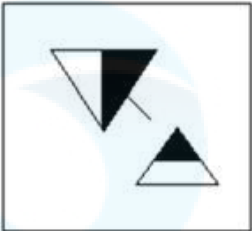
Question ID : 264330109198  
Option 1 ID : 264330429072  
Option 2 ID : 264330429071  
Option 3 ID : 264330429069  
Option 4 ID : 264330429070  
Status : Answered  
Chosen Option : 2

Q.4 Select the figure that will come next in the following figure series.

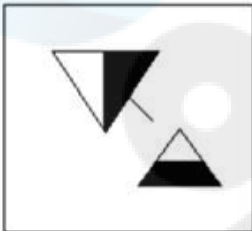


Ans

✗ 1.



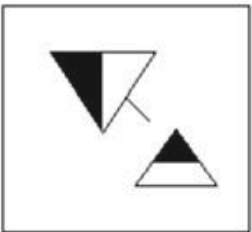
✓ 2.



✗ 3.



✗ 4.



Question ID : 26433087083  
Option 1 ID : 264330341973  
Option 2 ID : 264330341974  
Option 3 ID : 264330341976  
Option 4 ID : 264330341975  
Status : Answered  
Chosen Option : 2

Q.5 Select the option that represents the letters that, when sequentially placed in the blanks below, will complete the letter-series.  
a, b, a, b, b, \_, a, b, a, b, \_, a, a, b, a, b, b, \_

- Ans ☒ 1. b, a, b  
☒ 2. a, b, a  
☒ 3. b, b, b  
☒ 4. a, a, a

Question ID : 264330106617  
Option 1 ID : 264330418772  
Option 2 ID : 264330418769  
Option 3 ID : 264330418770  
Option 4 ID : 264330418771  
Status : Answered  
Chosen Option : 2

Q.6 Select the number from among the given options that can replace the question mark (?) in the following series.  
144, 171, 200, ?, 264

- Ans ☒ 1. 240  
☒ 2. 256  
☒ 3. 225  
☒ 4. 231

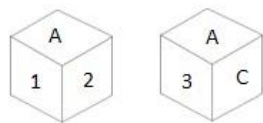
Question ID : 26433074540  
Option 1 ID : 264330292251  
Option 2 ID : 264330292249  
Option 3 ID : 264330292248  
Option 4 ID : 264330292250  
Status : Answered  
Chosen Option : 4

Q.7 Which letter-cluster will replace the question mark (?) to complete the given series?  
FOHV, CKER, ?, WCYJ, TYVF

- Ans ☒ 1. XHBM  
☒ 2. ZGBN  
☒ 3. AFCP  
☒ 4. AHCO

Question ID : 26433086264  
Option 1 ID : 264330338749  
Option 2 ID : 264330338751  
Option 3 ID : 264330338750  
Option 4 ID : 264330338752  
Status : Answered  
Chosen Option : 2

Q.8 Six characters A, B, C, 1, 2 and 3 are written on different faces of a dice. Two positions of this dice are shown in the figure. Find the character on the face opposite to 3.



- Ans
- ☒ 1. B
  - ☒ 2. 1
  - ☒ 3. 2
  - ☒ 4. C

Question ID : 264330109199  
Option 1 ID : 264330429075  
Option 2 ID : 264330429073  
Option 3 ID : 264330429074  
Option 4 ID : 264330429076  
Status : Answered  
Chosen Option : 2

Q.9 In a certain code language, 'BLOCK' is coded as LBCON and 'CABIN' is coded as ACIBQ. How will 'SUITE' be coded in the same language?

- Ans
- ☒ 1. USTIH
  - ☒ 2. UTSEH
  - ☒ 3. ETHUS
  - ☒ 4. USHTI

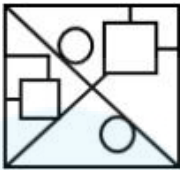
Question ID : 264330132205  
Option 1 ID : 264330517916  
Option 2 ID : 264330517918  
Option 3 ID : 264330517915  
Option 4 ID : 264330517917  
Status : Answered  
Chosen Option : 1

Q.10 Select the option in which the given figure is embedded (rotation is NOT allowed).

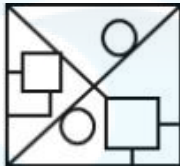


Ans

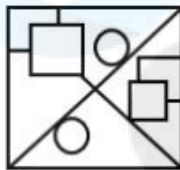
✗ 1.



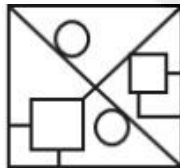
✗ 2.



✓ 3.



✗ 4.



Question ID : 264330126080

Option 1 ID : 264330493992

Option 2 ID : 264330493994

Option 3 ID : 264330493993

Option 4 ID : 264330493995

Status : Answered

Chosen Option : 3

Q.11 In a certain code language, 'MOBILE' is written as 'NQEMQK' and 'BISHOP' is written as 'CKVLTV'. How will 'CHARGE' be written in that language?

Ans ✗ 1. DJEVLJ

✗ 2. DJDWLK

✓ 3. DJDVLK

✗ 4. DJDVKL

Question ID : 26433070269

Option 1 ID : 264330275553

Option 2 ID : 264330275555

Option 3 ID : 264330275554

Option 4 ID : 264330275552

Status : Answered

Chosen Option : 3

Q.12 Select the correct option that indicates the arrangement of the given words in the order in which they appear in an English dictionary.

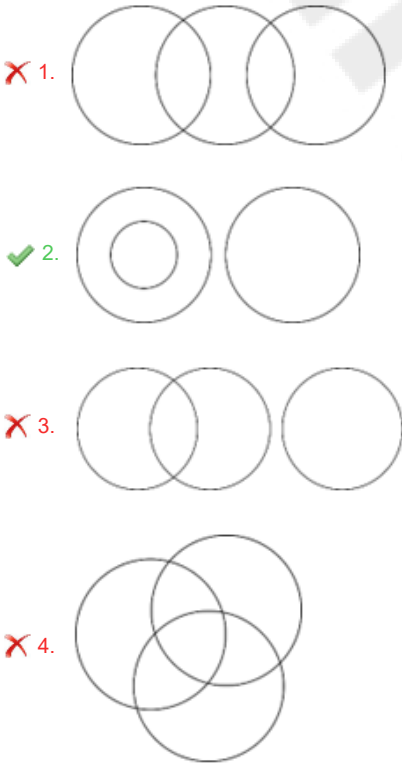
- 1. Warehouse
- 2. Warden
- 3. Warship
- 4. Wardrobe
- 5. Warrant
- 6. Warfare

Ans ☒ 1. 4, 2, 1, 6, 5, 3  
☒ 2. 2, 4, 1, 6, 5, 3  
☒ 3. 2, 4, 6, 5, 1, 3  
☒ 4. 2, 4, 1, 5, 6, 3

Question ID : 264330145381  
Option 1 ID : 264330569781  
Option 2 ID : 264330569780  
Option 3 ID : 264330569779  
Option 4 ID : 264330569782  
Status : Answered  
Chosen Option : 2

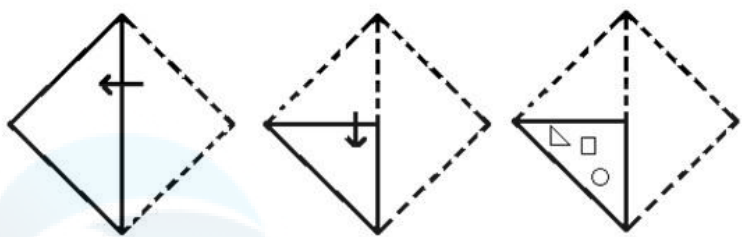
Q.13 Select the Venn diagram that best illustrates the relationship between the following classes.  
Clothes, Shoes, Shirts

Ans

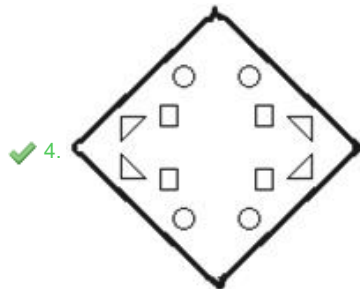
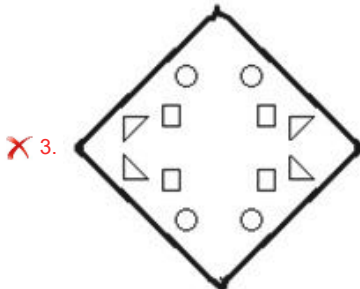
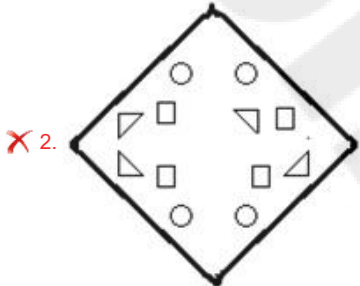
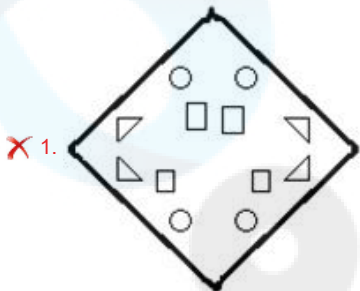


Question ID : 264330132029  
Option 1 ID : 264330517212  
Option 2 ID : 264330517214  
Option 3 ID : 264330517211  
Option 4 ID : 264330517213  
Status : Answered  
Chosen Option : 2

Q.14 The sequence of folding a piece of paper and the manner in which the folded paper is cut is shown in the following figures. How would this paper look when unfolded?



Ans



Question ID : 26433074791  
Option 1 ID : 264330293252  
Option 2 ID : 264330293255  
Option 3 ID : 264330293254  
Option 4 ID : 264330293253

Status : Answered

Chosen Option : 4



Q.15 If A denotes '+', B denotes '×', C denotes '−', and D denotes '÷', then what will be the value of the following equation?  
11 B 12 C 144 D 24 A 57 = ?

- Ans ☒ 1. 180  
☒ 2. 183  
☒ 3. 186  
☒ 4. 160

Question ID : 264330129780  
Option 1 ID : 264330508351  
Option 2 ID : 264330508352  
Option 3 ID : 264330508354  
Option 4 ID : 264330508353  
Status : Answered  
Chosen Option : 2

Q.16 Q + J means "Q is the Husband of J"  
Q − J means "Q is the Father of J"  
Q × J means "Q is the Mother of J"  
Q \* J means "Q is the Daughter of J"

If D \* V + B × U, how is D related to U?

- Ans ☒ 1. Sister  
☒ 2. Mother  
☒ 3. Brother  
☒ 4. Daughter

Question ID : 264330130334  
Option 1 ID : 264330510448  
Option 2 ID : 264330510450  
Option 3 ID : 264330510447  
Option 4 ID : 264330510449  
Status : Answered  
Chosen Option : 1

Q.17 Q is to the east of S. E is to the south of S. P is to the north-east of Q and north of T. If T is to the south-east of Q, what is the position of S with respect to T? (All positions are arranged in GRID pattern)

- Ans ☒ 1. South-east  
☒ 2. South-west  
☒ 3. West  
☒ 4. North-west

Question ID : 26433089523  
Option 1 ID : 264330351596  
Option 2 ID : 264330351595  
Option 3 ID : 264330351594  
Option 4 ID : 264330351593  
Status : Answered  
Chosen Option : 4

Q.18 In a certain code language, 'SPAM' is coded as '36' and 'JUG' is coded as '27'. How will 'FROCK' be coded in that language?

- Ans
- ☒ 1. 72
  - ☒ 2. 45
  - ☒ 3. 90
  - ☒ 4. 48

Question ID : 26433079046  
Option 1 ID : 264330310189  
Option 2 ID : 264330310191  
Option 3 ID : 264330310188  
Option 4 ID : 264330310190  
Status : Answered  
Chosen Option : 2

Q.19 Select the option figure in which the given figure is embedded as its part (rotation is NOT allowed).



Ans

- ☒ 1.
- ☒ 2.
- ☒ 3.
- ☒ 4.

Question ID : 264330117424  
Option 1 ID : 264330461739  
Option 2 ID : 264330461738  
Option 3 ID : 264330461740  
Option 4 ID : 264330461737  
Status : Answered  
Chosen Option : 1

Q.20 Four letter-clusters have been given, out of which three are alike in some manner and one is different. Select the odd letter-cluster.

- Ans ☒ 1. SRWX  
☒ 2. HGLM  
☒ 3. POTU  
☒ 4. DBGH

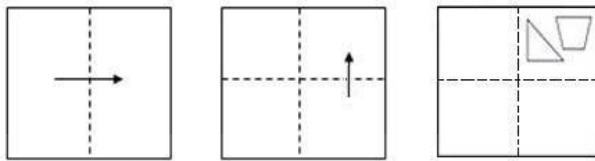
Question ID : 264330180751  
Option 1 ID : 264330708974  
Option 2 ID : 264330708972  
Option 3 ID : 264330708973  
Option 4 ID : 264330708971  
Status : Answered  
Chosen Option : 4

Q.21 'T + U' means 'T is the mother of U'.  
'T - U' means 'T is the father of U'.  
'T \$ U' means 'T is the husband of U'.  
'T # U' means 'T is the daughter of U'.  
If A # C \$ V + X, then how is A related to X?

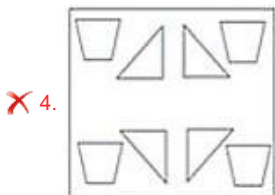
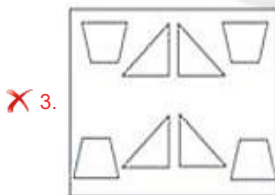
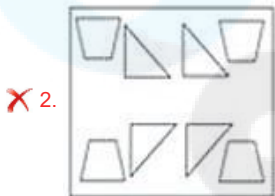
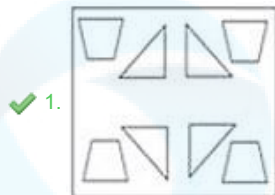
- Ans ☒ 1. Brother  
☒ 2. Sister  
☒ 3. Father  
☒ 4. Daughter

Question ID : 264330145387  
Option 1 ID : 264330569803  
Option 2 ID : 264330569804  
Option 3 ID : 264330569806  
Option 4 ID : 264330569805  
Status : Answered  
Chosen Option : 2

Q.22 A paper is folded and cut as shown below. How will it appear when unfolded?



Ans



Question ID : 26433091688  
Option 1 ID : 264330360118  
Option 2 ID : 264330360119  
Option 3 ID : 264330360117  
Option 4 ID : 264330360120  
Status : Answered  
Chosen Option : 1

Q.23 Select the set in which the numbers are related in the same way as are the numbers of the following sets.

(NOTE : Operations should be performed on the whole numbers, without breaking down the numbers into its constituent digits. E.g. 13 – Operations on 13 such as adding /subtracting /multiplying etc. to 13 can be performed. Breaking down 13 into 1 and 3 and then performing mathematical operations on 1 and 3 is not allowed)

(112, 327, 215), (98, 254, 156)

- Ans ☒ 1. (108, 209, 184)  
☒ 2. (105, 347, 322)  
☒ 3. (126, 268, 142)  
☒ 4. (281, 490,309)

Question ID : 264330145298  
Option 1 ID : 264330569448  
Option 2 ID : 264330569447  
Option 3 ID : 264330569450  
Option 4 ID : 264330569449  
Status : Answered  
Chosen Option : 3

Q.24 Select the set in which the numbers are related in the same way as are the numbers of the following set.

(NOTE : Operations should be performed on the whole numbers, without breaking down the numbers into its constituent digits. E.g. 13 – Operations on 13 such as adding/ subtracting/ multiplying etc. to 13 can be performed. Breaking down 13 into 1 and 3 and then performing mathematical operations on 1 and 3 is NOT allowed)

(5, 4, 2)  
(9, 9, 3)

- Ans ☒ 1. (21,39,1)  
☒ 2. (5,2,6)  
☒ 3. (24,43,34)  
☒ 4. (17,6,5)

Question ID : 264330145333  
Option 1 ID : 264330569590  
Option 2 ID : 264330569588  
Option 3 ID : 264330569589  
Option 4 ID : 264330569587  
Status : Not Answered  
Chosen Option : --

Q.25 Seven people, A, B, C, D, E, F and G, are sitting in a straight row, facing north. Only 2 people sit to the right of D. G is an immediate neighbour of D. Only 3 people sit between A and G. Only 2 people sit between B and C. E is not an immediate neighbour of C. F sits to the immediate right of G. Who sits to the immediate left of A?

- Ans ☒ 1. E  
☒ 2. C  
☒ 3. D  
☒ 4. B

Question ID : 264330145410  
Option 1 ID : 264330569897  
Option 2 ID : 264330569896  
Option 3 ID : 264330569898  
Option 4 ID : 264330569895  
Status : Answered  
Chosen Option : 2

Q.26 Select the option that represents the correct order of the given words as they would appear in an English dictionary?

1. Brochure
2. Brine
3. Bright
4. Brief
5. Brocade

Ans ☒ 1. 1, 2, 3, 4, 5  
☒ 2. 1, 2, 3, 5, 4  
☒ 3. 4, 3, 2, 5, 1  
☒ 4. 3, 2, 5, 4, 1

Question ID : 26433067247  
Option 1 ID : 264330263500  
Option 2 ID : 264330263502  
Option 3 ID : 264330263503  
Option 4 ID : 264330263501  
Status : Answered  
Chosen Option : 3

Q.27 If '+' means '-', '-' means 'x', 'x' means '÷' and '÷' means '+', what will come in place of '?' in the following equation?

$$79 \div 64 \times 8 - 7 + 12 = ?$$

Ans ☒ 1. 123  
☒ 2. 117  
☒ 3. 138  
☒ 4. 147

Question ID : 264330101147  
Option 1 ID : 264330397135  
Option 2 ID : 264330397136  
Option 3 ID : 264330397134  
Option 4 ID : 264330397133  
Status : Answered  
Chosen Option : 1

Q.28 Two statements are given followed by three conclusions numbered I, II and III. Assuming the statements to be true, even if they seem to be at variance with commonly known facts, decide which of the conclusions logically follow(s) from the statements.

Statements:

All keys are locks.

No door is a lock.

Conclusions:

I. Some locks are doors.

II. Some locks are keys.

III. No key is a door.

Ans ☒ 1. Both conclusions I and II follow.  
☒ 2. Conclusions I, II and III follow.  
☒ 3. Both conclusions II and III follow.  
☒ 4. Both conclusions I and III follow.

Question ID : 26433056067  
Option 1 ID : 264330219252  
Option 2 ID : 264330219255  
Option 3 ID : 264330219254  
Option 4 ID : 264330219253  
Status : Answered  
Chosen Option : 3

Q.29 In a certain code language, 'Live long' is coded as 'mu ae', 'Road is long' is coded as 'ae si du' and 'Game is live' is coded as 'si mu zt'. What is the code for the word 'Game'?

- Ans
- ☒ 1. si
  - ☒ 2. mu
  - ☒ 3. zt
  - ☒ 4. ae

Question ID : 26433074769  
Option 1 ID : 264330293164  
Option 2 ID : 264330293167  
Option 3 ID : 264330293165  
Option 4 ID : 264330293166  
Status : Answered  
Chosen Option : 3

Q.30 Which two signs should be interchanged to make the given equation correct?  
 $42 \div 7 + 11 \times 87 - 12 = 141$

- Ans
- ☒ 1.  $\div$  and  $-$
  - ☒ 2.  $\div$  and  $+$
  - ☒ 3.  $\times$  and  $+$
  - ☒ 4.  $-$  and  $\times$

Question ID : 264330129526  
Option 1 ID : 264330507470  
Option 2 ID : 264330507471  
Option 3 ID : 264330507472  
Option 4 ID : 264330507473  
Status : Answered  
Chosen Option : 3

Q.31 Select the option that is related to the third word in the same way as the second word is related to the first word.  
(The words must be considered as meaningful words and must not be related to each other based on the number of letters/number of consonants/vowels in the word.)  
Pressure : Barometer :: Electricity : ?

- Ans
- ☒ 1. Cyclotron
  - ☒ 2. Bolometer
  - ☒ 3. Audiometer
  - ☒ 4. Multimeter

Question ID : 26433087296  
Option 1 ID : 264330342821  
Option 2 ID : 264330342823  
Option 3 ID : 264330342822  
Option 4 ID : 264330342824  
Status : Answered  
Chosen Option : 4

Q.32 Which of the following numbers will replace the question mark (?) in the given series?  
270, 241, 212, ?, 154, 125

- Ans ☒ 1. 198  
☒ 2. 186  
☒ 3. 183  
☒ 4. 192

Question ID : 26433067626  
Option 1 ID : 264330265016  
Option 2 ID : 264330265018  
Option 3 ID : 264330265019  
Option 4 ID : 264330265017  
Status : Answered  
Chosen Option : 3

Q.33 Select the option that is related to the third term in the same way as the second term is related to the first term and the sixth term is related to the fifth term.  
25 : 18 :: 37 : ? :: 49 : 36

- Ans ☒ 1. 29  
☒ 2. 32  
☒ 3. 30  
☒ 4. 27

Question ID : 26433079159  
Option 1 ID : 264330310643  
Option 2 ID : 264330310640  
Option 3 ID : 264330310642  
Option 4 ID : 264330310641  
Status : Answered  
Chosen Option : 4

Q.34 Six students Meera, Jigyasa, Tarun, Naina, Shambhavi and Avni are sitting around a circular table facing the centre (not necessarily in the same order). Shambhavi is an immediate neighbour of both Jigyasa and Avni. Tarun is sitting third to the left of Jigyasa. Meera is sitting second to the right of Avni. Who is sitting second to the left of Jigyasa?

- Ans ☒ 1. Meera  
☒ 2. Naina  
☒ 3. Avni  
☒ 4. Tarun

Question ID : 26433082277  
Option 1 ID : 264330322943  
Option 2 ID : 264330322944  
Option 3 ID : 264330322941  
Option 4 ID : 264330322942  
Status : Answered  
Chosen Option : 2



Q.35 Which letter-cluster will replace the question mark (?) to complete the given series?  
BRCQ, EPFO, ?, KLLK, NJOI





- Ans ☒ 1. HINO  
☒ 2. GNMI  
☒ 3. HNIM  
☒ 4. GINO

Question ID : 264330180761  
Option 1 ID : 264330709011  
Option 2 ID : 264330709014  
Option 3 ID : 264330709012  
Option 4 ID : 264330709013  
Status : Answered  
Chosen Option : 3

Q.36 Select the Venn diagram that best illustrates the relationship between the following classes.

Animal, Jungle, Wild Animal

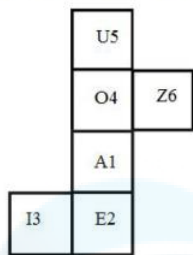
Ans

- ☒ 1. 
- ☒ 2. 
- ☒ 3. 
- ☒ 4. 

Question ID : 264330145359  
Option 1 ID : 264330569692  
Option 2 ID : 264330569693  
Option 3 ID : 264330569694  
Option 4 ID : 264330569691  
Status : Answered  
Chosen Option : 4

**Q.37** When the following figure is folded to form a cube, which letter-number will be on the face opposite to the face showing the letter-number 'A1'?

(The elements are shown to indicate the sides only.)



- Ans**
- ✓ 1. U5
  - ✗ 2. O4
  - ✗ 3. I3
  - ✗ 4. E2

Question ID : 26433065674

Option 1 ID : 264330257257

Option 2 ID : 264330257256

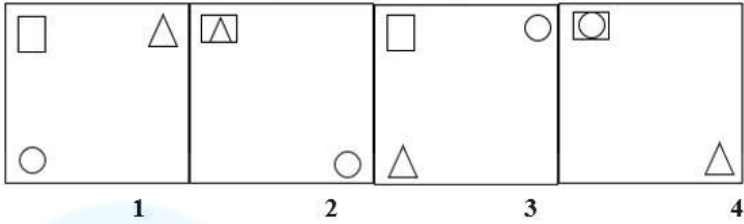
Option 3 ID : 264330257259

Option 4 ID : 264330257258

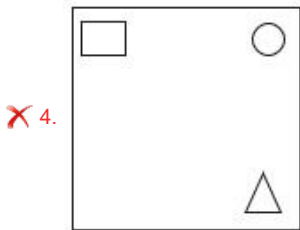
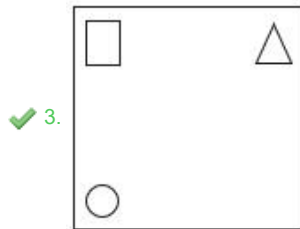
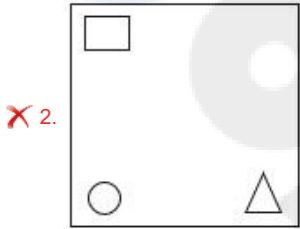
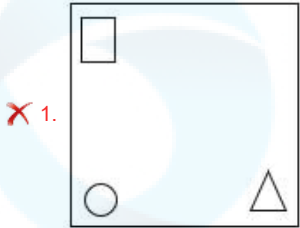
Status : Answered

Chosen Option : 1

Q.38 Which of the given figures when placed in the 5<sup>th</sup> position would continue the series that is established by the first four figures?



Ans



Question ID : 26433087304

Option 1 ID : 264330342854

Option 2 ID : 264330342853

Option 3 ID : 264330342856

Option 4 ID : 264330342855

Status : Answered

Chosen Option : 3

**Q.39** Select the option that is related to the third word in the same way as the second word is related to the first word.  
(The words must be considered as meaningful words and must not be related to each other based on the number of letters/number of consonants/vowels in the word.)

Centre : Focus :: Vicar : ?

- Ans
- ☒ 1. Life
  - ☒ 2. Priest
  - ☒ 3. Building
  - ☒ 4. Riddle

Question ID : 264330145397  
Option 1 ID : 264330569846  
Option 2 ID : 264330569845  
Option 3 ID : 264330569844  
Option 4 ID : 264330569843  
Status : Answered  
Chosen Option : 4

**Q.40** Three of the following four letter-clusters are alike in a certain way and one is different.  
Pick the odd one out.

- Ans
- ☒ 1. MOKN
  - ☒ 2. SQUH
  - ☒ 3. GIET
  - ☒ 4. CEAX

Question ID : 26433068791  
Option 1 ID : 264330269679  
Option 2 ID : 264330269677  
Option 3 ID : 264330269678  
Option 4 ID : 264330269676  
Status : Answered  
Chosen Option : 2

**Q.41** Which two signs should be interchanged to make the given equation correct?  
 $39 \div 3 - 11 + 57 \times 29 = 171$

- Ans
- ☒ 1. - and ×
  - ☒ 2. - and +
  - ☒ 3. ÷ and +
  - ☒ 4. ÷ and -

Question ID : 264330129524  
Option 1 ID : 264330507465  
Option 2 ID : 264330507464  
Option 3 ID : 264330507463  
Option 4 ID : 264330507462  
Status : Answered  
Chosen Option : 1

Q.42 Stanley starts cycling from Point A. He cycles  $X$  km towards the west and then turns right and cycles 3 km. He again turns right and cycles for  $X+1$  km. He again turns right and cycles for  $2X+1$  km. He takes a final right turn and cycles for 1 km to stop at Point B. Point B is 6 km south of Point A. What is the value of  $X$ ?

- Ans
- ☒ 1. 9
  - ☒ 2. 3
  - ☒ 3. 4
  - ☒ 4. 5

Question ID : 26433097236  
Option 1 ID : 264330381644  
Option 2 ID : 264330381641  
Option 3 ID : 264330381643  
Option 4 ID : 264330381642  
Status : Answered  
Chosen Option : 3

Q.43 In a certain code language, 'PIN' is coded as 9 and 'CHARGER' is coded as 49. How will 'CABLE' be coded in the same language?

- Ans
- ☒ 1. 27
  - ☒ 2. 25
  - ☒ 3. 18
  - ☒ 4. 36

Question ID : 264330132204  
Option 1 ID : 264330517912  
Option 2 ID : 264330517911  
Option 3 ID : 264330517913  
Option 4 ID : 264330517914  
Status : Answered  
Chosen Option : 2

Q.44 Which of the following numbers will replace the question mark (?) in the given series?  
5, 20, 60, 240, 720, ?

- Ans
- ☒ 1. 2580
  - ☒ 2. 2880
  - ☒ 3. 2160
  - ☒ 4. 2675

Question ID : 26433057344  
Option 1 ID : 264330224361  
Option 2 ID : 264330224362  
Option 3 ID : 264330224363  
Option 4 ID : 264330224360  
Status : Answered  
Chosen Option : 2

**Q.45** Two statements are given, followed by two conclusions numbered I and II. Assuming the statements to be true, even if they seem to be at variance with commonly known facts, decide which of the conclusions logically follow(s) from the statements.

Statements:

All rivers are lakes.

Some seas are rivers.

Conclusion:

I)Some seas are lakes.

II)All lakes are rivers.

Ans ☒ 1. Neither Conclusion I nor II follows.

☒ 2. Only Conclusion II follows.

☒ 3. Only Conclusion I follows

☒ 4. Both Conclusions I and II follow.

Question ID : 26433067708

Option 1 ID : 264330265347

Option 2 ID : 264330265345

Option 3 ID : 264330265344

Option 4 ID : 264330265346

Status : Answered

Chosen Option : 3

**Q.46** If '+' means '-', '-' means 'x', 'x' means '÷', '÷' means '+', then what will come in place of the question mark (?) in the following equation?  
 $39 \times 3 - 11 \div 57 + 29 = ?$

Ans ☒ 1. 163

☒ 2. 190

☒ 3. 185

☒ 4. 171

Question ID : 264330126060

Option 1 ID : 264330493912

Option 2 ID : 264330493915

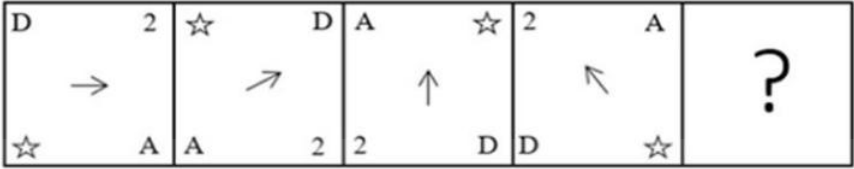
Option 3 ID : 264330493914

Option 4 ID : 264330493913

Status : Answered

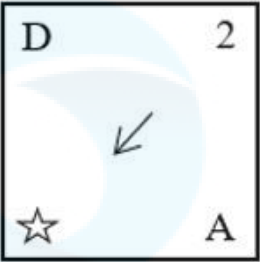
Chosen Option : 4

Q.47 Which figure from the given options would replace the question mark (?) if the following figure series were to be continued?

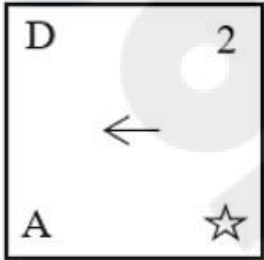


Ans

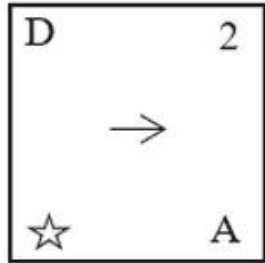
✗ 1.



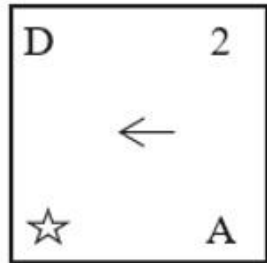
✗ 2.



✗ 3.



✓ 4.



Question ID : 264330145483

Option 1 ID : 264330570188

Option 2 ID : 264330570189

Option 3 ID : 264330570190

Option 4 ID : 264330570187

Status : Answered

Chosen Option : 4

**Q.48** If M denotes '-', N denotes '+', O denotes '×', and P denotes '÷', then what will come in place of '?' in the following equation?

$$21 \text{ O } 5 \text{ P } 69 \text{ N } 3 \text{ P } \sqrt{225} \text{ M } 88 = ?$$

- Ans**
- ☒ 1. 61
  - ☒ 2. 65
  - ☒ 3. 55
  - ☒ 4. 50

Question ID : 26433057620  
Option 1 ID : 264330225467  
Option 2 ID : 264330225464  
Option 3 ID : 264330225466  
Option 4 ID : 264330225465  
Status : Answered  
Chosen Option : 3

**Q.49** Which of the following numbers will replace the question mark (?) in the given series?

69, 65, 67, 63, ?, 61

- Ans**
- ☒ 1. 65
  - ☒ 2. 60
  - ☒ 3. 62
  - ☒ 4. 64

Question ID : 26433091008  
Option 1 ID : 264330357444  
Option 2 ID : 264330357442  
Option 3 ID : 264330357441  
Option 4 ID : 264330357443  
Status : Answered  
Chosen Option : 1

**Q.50** Which two mathematical signs should be interchanged to make the given equation correct?

$$(45 \times 2) \div 15 - (6 \times 3) + 10 - (63 \div 21) = 17$$

- Ans**
- ☒ 1. + and +
  - ☒ 2. × and −
  - ☒ 3. − and +
  - ☒ 4. ÷ and ×

Question ID : 264330145313  
Option 1 ID : 264330569507  
Option 2 ID : 264330569509  
Option 3 ID : 264330569510  
Option 4 ID : 264330569508  
Status : Answered  
Chosen Option : 3



Q.1 Lavani is a traditional dance of which of the following states?

- Ans ☒ 1. Uttar Pradesh
- ☒ 2. Maharashtra
- ☒ 3. Himachal Pradesh
- ☒ 4. Madhya Pradesh

Question ID : 264330164796  
Option 1 ID : 264330646311  
Option 2 ID : 264330646312  
Option 3 ID : 264330646314  
Option 4 ID : 264330646313  
Status : Answered  
Chosen Option : 2

Q.2 Which of the following scientists provided the Law of Octaves?

- Ans ☒ 1. Galileo Galilei
- ☒ 2. John Newlands
- ☒ 3. Michael Faraday
- ☒ 4. Marie Curie

Question ID : 264330131108  
Option 1 ID : 264330513544  
Option 2 ID : 264330513543  
Option 3 ID : 264330513545  
Option 4 ID : 264330513546  
Status : Answered  
Chosen Option : 2

Q.3 Who among the following Bahmani sultan was noted for cruelty and hence got the title as 'Zalim'?

- Ans ☒ 1. Humayun
- ☒ 2. Firuz Shah
- ☒ 3. Mujahid Shah
- ☒ 4. Ahmad Shah

Question ID : 264330109014  
Option 1 ID : 264330428334  
Option 2 ID : 264330428335  
Option 3 ID : 264330428336  
Option 4 ID : 264330428333  
Status : Answered  
Chosen Option : 4

Q.4 According to the Koppen classification, Which regions experience cold humid winter with short summers?

- Ans ☒ 1. Western Rajasthan
- ☒ 2. Northern Madhya Pradesh
- ☒ 3. South of Goa
- ☒ 4. Arunachal Pradesh

Question ID : 264330145192  
Option 1 ID : 264330569023  
Option 2 ID : 264330569026  
Option 3 ID : 264330569025  
Option 4 ID : 264330569024  
Status : Answered  
Chosen Option : 4

Q.5 The Rajpath was decided to be a permanent venue for the Republic Day parade from which of the following year onwards?

- Ans
- ☒ 1. 1959
  - ☒ 2. 1951
  - ☒ 3. 1955
  - ☒ 4. 1958

Question ID : 264330145139  
Option 1 ID : 264330568814  
Option 2 ID : 264330568813  
Option 3 ID : 264330568811  
Option 4 ID : 264330568812  
Status : Not Answered  
Chosen Option : --

Q.6 Which disease is caused by NOT having enough vitamin C in the diet for at least 3 months leading to weakness, anaemia, gum disease and skin problems?

- Ans
- ☒ 1. Pellagra
  - ☒ 2. Rickets
  - ☒ 3. Beriberi
  - ☒ 4. Scurvy

Question ID : 264330145200  
Option 1 ID : 264330569056  
Option 2 ID : 264330569058  
Option 3 ID : 264330569057  
Option 4 ID : 264330569055  
Status : Answered  
Chosen Option : 4

Q.7 What do you call a Glycocalyx that is a loose sheath type?

- Ans
- ☒ 1. Mesosomes
  - ☒ 2. Capsule
  - ☒ 3. Tubules
  - ☒ 4. Slime layer

Question ID : 264330145212  
Option 1 ID : 264330569105  
Option 2 ID : 264330569104  
Option 3 ID : 264330569106  
Option 4 ID : 264330569103  
Status : Not Answered  
Chosen Option : --

Q.8 Assessment of the country's GDP growth, external balance and fiscal balance are presented in which part of the budget document?

- Ans
- ☒ 1. Medium-term Fiscal Policy Statement
  - ☒ 2. Appropriation bill
  - ☒ 3. Fiscal Policy Strategy Statement
  - ☒ 4. Macroeconomic Framework Statement

Question ID : 264330141436  
Option 1 ID : 264330554079  
Option 2 ID : 264330554082  
Option 3 ID : 264330554080  
Option 4 ID : 264330554081  
Status : Answered  
Chosen Option : 3

Q.9 The seven years of war in the 18th century was fought between Britain and \_\_\_\_\_.

- Ans ☒ 1. Spain  
☒ 2. France  
☒ 3. Germany  
☒ 4. Portugal

Question ID : 264330165387  
Option 1 ID : 264330648630  
Option 2 ID : 264330648628  
Option 3 ID : 264330648627  
Option 4 ID : 264330648629  
Status : Answered  
Chosen Option : 2

Q.10 At the time of launch of the Smart Cities Mission, how many cities were proposed to be covered under this scheme?

- Ans ☒ 1. 100  
☒ 2. 50  
☒ 3. 75  
☒ 4. 25

Question ID : 26433064565  
Option 1 ID : 264330252855  
Option 2 ID : 264330252853  
Option 3 ID : 264330252854  
Option 4 ID : 264330252852  
Status : Not Answered  
Chosen Option : --

Q.11 What is the standard weight of a hockey ball?

- Ans ☒ 1. 161 gm - 156 gm  
☒ 2. 162 gm - 156 gm  
☒ 3. 160 gm - 156 gm  
☒ 4. 163 gm - 156 gm

Question ID : 264330118470  
Option 1 ID : 264330465282  
Option 2 ID : 264330465283  
Option 3 ID : 264330465281  
Option 4 ID : 264330465284  
Status : Not Answered  
Chosen Option : --

Q.12 Choose the correct statement(s) related to 'continentality'.  
a. The sea exerts a moderating influence on climate.  
b. As the distance from the sea increases, the people experience extreme weather conditions.  
c. As one goes from the surface of the earth to higher altitudes, the atmosphere becomes less dense and temperature decreases.

- Ans ☒ 1. a and c  
☒ 2. Only c  
☒ 3. b and c  
☒ 4. a and b

Question ID : 264330169314  
Option 1 ID : 264330664038  
Option 2 ID : 264330664035  
Option 3 ID : 264330664037  
Option 4 ID : 264330664036  
Status : Not Answered  
Chosen Option : --

Q.13 The Arms Act was passed in \_\_\_\_\_ that prevented Indians from keeping arms without an appropriate license.

- Ans ☒ 1. 1909  
☒ 2. 1897  
☒ 3. 1878  
☒ 4. 1912

Question ID : 264330112335  
Option 1 ID : 264330441428  
Option 2 ID : 264330441427  
Option 3 ID : 264330441425  
Option 4 ID : 264330441426  
Status : Answered  
Chosen Option : 3

Q.14 Who takes the salute during the Republic Day parade at New Delhi?

- Ans ☒ 1. Governor  
☒ 2. President  
☒ 3. Chief Justice  
☒ 4. Prime Minister

Question ID : 264330164810  
Option 1 ID : 264330646369  
Option 2 ID : 264330646368  
Option 3 ID : 264330646370  
Option 4 ID : 264330646367  
Status : Answered  
Chosen Option : 2

Q.15 According to the Census of India 2011, which of the following states has the highest Hindu population percentage of total population?

- Ans ☒ 1. Madhya Pradesh  
☒ 2. Haryana  
☒ 3. Himachal Pradesh  
☒ 4. Uttar Pradesh

Question ID : 264330166808  
Option 1 ID : 264330654270  
Option 2 ID : 264330654269  
Option 3 ID : 264330654267  
Option 4 ID : 264330654268  
Status : Answered  
Chosen Option : 3

Q.16 Which Article of the Indian Constitution mentions that all the authorities— civil and judicial— in the territory of India shall act in aid of the Supreme Court?

- Ans ☒ 1. Article 143  
☒ 2. Article 144  
☒ 3. Article 142  
☒ 4. Article 141

Question ID : 264330164950  
Option 1 ID : 264330646929  
Option 2 ID : 264330646930  
Option 3 ID : 264330646928  
Option 4 ID : 264330646927  
Status : Not Answered  
Chosen Option : --

Q.17 \_\_\_\_\_ river has the least storage capacity of usable water.

- Ans ☒ 1. Godavari  
☒ 2. Ganges  
☒ 3. Brahmaputra  
☒ 4. Krishna

Question ID : 264330163238  
Option 1 ID : 264330640263  
Option 2 ID : 264330640264  
Option 3 ID : 264330640266  
Option 4 ID : 264330640265  
Status : Not Answered  
Chosen Option : --

Q.18 Dihang and Lohit are rivers in which of the following regions?

- Ans ☒ 1. Sikkim and Manipur  
☒ 2. Punjab and Himachal  
☒ 3. Arunachal Pradesh and Assam  
☒ 4. Jammu and Kashmir

Question ID : 264330119796  
Option 1 ID : 264330469462  
Option 2 ID : 264330469459  
Option 3 ID : 264330469461  
Option 4 ID : 264330469460  
Status : Answered  
Chosen Option : 3

Q.19 With which of the following dance forms is Thumri music associated?

- Ans ☒ 1. Sattriya  
☒ 2. Kathakali  
☒ 3. Kathak  
☒ 4. Bharatanatyam

Question ID : 26433064645  
Option 1 ID : 264330253174  
Option 2 ID : 264330253173  
Option 3 ID : 264330253175  
Option 4 ID : 264330253172  
Status : Not Answered  
Chosen Option : --

Q.20 Who among the following Mauryan king fasted to death and died at Shravanabelagola?

- Ans ☒ 1. Bindusara  
☒ 2. Dasharatha  
☒ 3. Chandragupta Maurya  
☒ 4. Ashoka

Question ID : 264330165560  
Option 1 ID : 264330649320  
Option 2 ID : 264330649322  
Option 3 ID : 264330649319  
Option 4 ID : 264330649321  
Status : Answered  
Chosen Option : 3

Q.21 Shifting agriculture is known as \_\_\_\_\_ in the Western Ghats.

- Ans ☒ 1. kumari  
☒ 2. dahiya  
☒ 3. koman  
☒ 4. waltre

Question ID : 264330113261  
Option 1 ID : 264330445130  
Option 2 ID : 264330445131  
Option 3 ID : 264330445129  
Option 4 ID : 264330445132  
Status : Not Answered  
Chosen Option : --

Q.22 In which of the following states are Aus, Boro and Aman paddy crops grown in a year?

- Ans ☒ 1. Punjab  
☒ 2. Odisha  
☒ 3. Haryana  
☒ 4. Uttarakhand

Question ID : 264330163196  
Option 1 ID : 264330640096  
Option 2 ID : 264330640095  
Option 3 ID : 264330640097  
Option 4 ID : 264330640098  
Status : Not Answered  
Chosen Option : --

Q.23 The measure of the force that can cause an object to rotate about an axis is called:

- Ans
- ☒ 1. moment of inertia
  - ☒ 2. power
  - ☒ 3. torque
  - ☒ 4. centripetal force

Question ID : 264330111861  
Option 1 ID : 264330439532  
Option 2 ID : 264330439530  
Option 3 ID : 264330439529  
Option 4 ID : 264330439531  
Status : Answered  
Chosen Option : 3

Q.24 Who among the following classical poets of the Sultanate period in India popularised Qawwali, a form of music which derived its name from the Arabic word 'qaul', meaning 'to speak'?

- Ans
- ☒ 1. Nizam al-Din Awliya
  - ☒ 2. Jalal al-Din Muhammad Rumi
  - ☒ 3. Amir Khusrau
  - ☒ 4. Shams al-Din Muhammad Hafiz

Question ID : 26433074824  
Option 1 ID : 264330293385  
Option 2 ID : 264330293386  
Option 3 ID : 264330293384  
Option 4 ID : 264330293387  
Status : Answered  
Chosen Option : 3

Q.25 What is the name of the 1,3-isomer (or meta-isomer) of benzenediol with the chemical formula  $C_6H_4(OH)_2$ ?

- Ans
- ☒ 1. m-Cresol
  - ☒ 2. Resorcinol
  - ☒ 3. Catechol
  - ☒ 4. Glycerol

Question ID : 264330110054  
Option 1 ID : 264330432496  
Option 2 ID : 264330432495  
Option 3 ID : 264330432494  
Option 4 ID : 264330432493  
Status : Not Answered  
Chosen Option : --

Q.26 Who was/were the founder(s) of the Theosophical Society?

- Ans
- ☒ 1. H P Blavatsky and Colonel Olcott
  - ☒ 2. Madam Bhikaji Cama
  - ☒ 3. Annie Besant
  - ☒ 4. Charles W Leadbeater and Emily Lutyens

Question ID : 26433099178  
Option 1 ID : 264330389328  
Option 2 ID : 264330389327  
Option 3 ID : 264330389325  
Option 4 ID : 264330389326  
Status : Answered  
Chosen Option : 2

Q.27 Which Articles of the Indian Constitution describe Fundamental Rights?

- Ans ☒ 1. Articles 5 to 11  
☒ 2. Articles 12 to 35  
☒ 3. Articles 36 to 51  
☒ 4. Articles 52 to 62

Question ID : 264330111520  
Option 1 ID : 264330438165  
Option 2 ID : 264330438166  
Option 3 ID : 264330438167  
Option 4 ID : 264330438168  
Status : Answered  
Chosen Option : 2

Q.28 Which of the following organisms belongs to phylum Apicomplexa?

- Ans ☒ 1. Sponge  
☒ 2. Physalia  
☒ 3. Hydra  
☒ 4. Plasmodium

Question ID : 26433082204  
Option 1 ID : 264330322651  
Option 2 ID : 264330322649  
Option 3 ID : 264330322650  
Option 4 ID : 264330322652  
Status : Answered  
Chosen Option : 2

Q.29 Select the INCORRECT pair of a famous minaret and its construction year in India.

- Ans ☒ 1. Shaheed Minar–1828 CE  
☒ 2. Chand Minar–1435 CE  
☒ 3. Char Minar–1664 CE  
☒ 4. Jhulta Minar–1452 CE

Question ID : 264330141821  
Option 1 ID : 264330555606  
Option 2 ID : 264330555603  
Option 3 ID : 264330555604  
Option 4 ID : 264330555605  
Status : Not Answered  
Chosen Option : --

Q.30 In 1932, who discovered the positron, a particle described as ‘carrying a positive charge but having a mass of the same order of magnitude as that normally possessed by a free negative electron’?

- Ans ☒ 1. Niels Bohr  
☒ 2. Paul Dirac  
☒ 3. Ernest Rutherford  
☒ 4. Carl Anderson

Question ID : 26433055070  
Option 1 ID : 264330215267  
Option 2 ID : 264330215264  
Option 3 ID : 264330215265  
Option 4 ID : 264330215266  
Status : Answered  
Chosen Option : 3



**Q.31 Which of the following rights forbids employment of children below the age of 14 years in dangerous jobs?**

- Ans ☒ 1. Right to Equality  
☒ 2. Right to Constitutional Remedies  
☒ 3. Right against Exploitation  
☒ 4. Right to Freedom

Question ID : 264330116399  
Option 1 ID : 264330457684  
Option 2 ID : 264330457683  
Option 3 ID : 264330457681  
Option 4 ID : 264330457682  
Status : Answered  
Chosen Option : 3

**Q.32 Which of the following is NOT the manifestation of Iron-deficiency anaemia (IDA)?**

- Ans ☒ 1. Soft palate  
☒ 2. Blindness  
☒ 3. General pallor  
☒ 4. Paleness of conjunctiva of eyes

Question ID : 26433086903  
Option 1 ID : 264330341255  
Option 2 ID : 264330341256  
Option 3 ID : 264330341253  
Option 4 ID : 264330341254  
Status : Answered  
Chosen Option : 2

**Q.33 Which of the following books is an autobiography of the Indian politician LK Advani?**

- Ans ☒ 1. Wings of Fire: An Autobiography  
☒ 2. My Country My Life  
☒ 3. My Times: An Autobiography  
☒ 4. In Pursuit of Justice: An Autobiography

Question ID : 264330145179  
Option 1 ID : 264330568974  
Option 2 ID : 264330568972  
Option 3 ID : 264330568971  
Option 4 ID : 264330568973  
Status : Answered  
Chosen Option : 2

**Q.34 From which five-year plan did India start its journey of industrialisation?**

- Ans ☒ 1. Third Five-year Plan  
☒ 2. Second Five-year Plan  
☒ 3. Fifth Five-year Plan  
☒ 4. Fourth Five-year Plan

Question ID : 264330145231  
Option 1 ID : 264330569180  
Option 2 ID : 264330569182  
Option 3 ID : 264330569179  
Option 4 ID : 264330569181  
Status : Answered  
Chosen Option : 2

Q.35 Which of the following statements about green revolution is/are correct?  
I. Green revolution began in the 1960s.  
II. HYV of a seed made green revolution a success.  
III. Extensive use of cattle was also one constituent of green revolution.

- Ans ☒ 1. Only II and III  
☒ 2. Only I and II  
☒ 3. Only I  
☒ 4. Only II

Question ID : 264330141499  
Option 1 ID : 264330554333  
Option 2 ID : 264330554334  
Option 3 ID : 264330554331  
Option 4 ID : 264330554332  
Status : Answered  
Chosen Option : 2

Q.36 Ghanakanta Bora Borbayan has been conferred the Padma Shri award for his contribution to which of the following fields?

- Ans ☒ 1. Bhortal  
☒ 2. Bagurumba  
☒ 3. Sattriya  
☒ 4. Chhau

Question ID : 264330145161  
Option 1 ID : 264330568900  
Option 2 ID : 264330568899  
Option 3 ID : 264330568901  
Option 4 ID : 264330568902  
Status : Answered  
Chosen Option : 4

Q.37 The masculine aspect of the Manipuri classical dance is known as:

- Ans ☒ 1. Ras  
☒ 2. Choloms  
☒ 3. Pareng  
☒ 4. Maiba

Question ID : 26433092386  
Option 1 ID : 264330362834  
Option 2 ID : 264330362833  
Option 3 ID : 264330362835  
Option 4 ID : 264330362836  
Status : Answered  
Chosen Option : 2

Q.38 Which of the following Articles of the Constitution of India lays down the establishment of Public Service Commissions for the Union and for the States?

Ans ☒ 1. Article 315

☐ 2. Article 316

☐ 3. Article 317

☐ 4. Article 318

Question ID : 264330145262

Option 1 ID : 264330569303

Option 2 ID : 264330569304

Option 3 ID : 264330569305

Option 4 ID : 264330569306

Status : Answered

Chosen Option : 1

Q.39 Which of the following is an indirect tax?

Ans ☐ 1. Death duty

☐ 2. Interest tax

☒ 3. Goods and services tax

☐ 4. Capital gains tax

Question ID : 264330145244

Option 1 ID : 264330569233

Option 2 ID : 264330569232

Option 3 ID : 264330569234

Option 4 ID : 264330569231

Status : Answered

Chosen Option : 3

Q.40 The ball colour in the sport of Ball Badminton should be:

Ans ☒ 1. yellow

☐ 2. green

☐ 3. pink

☐ 4. red

Question ID : 26433059449

Option 1 ID : 264330232667

Option 2 ID : 264330232666

Option 3 ID : 264330232664

Option 4 ID : 264330232665

Status : Not Answered

Chosen Option : --

Q.41 What is the bicameral legislature of the Indian Constitution?

Ans ☐ 1. It is legislative body with three houses.

☒ 2. It is legislative body with two houses.

☐ 3. It is legislative body with one house.

☐ 4. It is legislative body with four houses.

Question ID : 264330118527

Option 1 ID : 264330465511

Option 2 ID : 264330465510

Option 3 ID : 264330465509

Option 4 ID : 264330465512

Status : Answered

Chosen Option : 2

Q.42 Neeruswamy Pillai and Rajaratanam Pillai are exponents of which musical instrument?

Ans ☒ 1. Nadaswaran

☒ 2. Mandolin

☒ 3. Mridangam

☒ 4. Sarangi

Question ID : 264330145152

Option 1 ID : 264330568863

Option 2 ID : 264330568865

Option 3 ID : 264330568864

Option 4 ID : 264330568866

Status : Not Answered

Chosen Option : --

Q.43 Living organisms have been on Earth for how much percent of Earth's history?

Ans ☒ 1. 80%

☒ 2. 20%

☒ 3. 60%

☒ 4. 40%

Question ID : 26433064467

Option 1 ID : 264330252460

Option 2 ID : 264330252463

Option 3 ID : 264330252461

Option 4 ID : 264330252462

Status : Not Answered

Chosen Option : --

Q.44 According to the 2011 Census, which state recorded the lowest literacy rate?

Ans ☒ 1. Arunachal Pradesh

☒ 2. Bihar

☒ 3. Andhra Pradesh

☒ 4. Jharkhand

Question ID : 264330110658

Option 1 ID : 264330434909

Option 2 ID : 264330434911

Option 3 ID : 264330434912

Option 4 ID : 264330434910

Status : Answered

Chosen Option : 2

Q.45 Which Article of the Indian Constitution refers to the Rights of Ministers with respect to the State Legislature?

Ans ☒ 1. Article 178

☒ 2. Article 177

☒ 3. Article 175

☒ 4. Article 176

Question ID : 264330114503

Option 1 ID : 264330450100

Option 2 ID : 264330450099

Option 3 ID : 264330450097

Option 4 ID : 264330450098

Status : Not Answered

Chosen Option : --

Q.46 In Ball Badminton, players change the ends in each game when a side first scores all of the following, EXCEPT:

- Ans ☒ 1. 18  
☒ 2. 9  
☒ 3. 27  
☒ 4. 11

Question ID : 26433059450  
Option 1 ID : 264330232670  
Option 2 ID : 264330232668  
Option 3 ID : 264330232671  
Option 4 ID : 264330232669  
Status : Not Answered  
Chosen Option : --

Q.47 In 1928, which equation was derived and combines quantum theory and special relativity to describe the behaviour of an electron moving at a relativistic speed?

- Ans ☒ 1. Bernoulli's equation  
☒ 2. Lorentz equation  
☒ 3. Helmholtz equation  
☒ 4. Dirac equation

Question ID : 264330141666  
Option 1 ID : 264330554985  
Option 2 ID : 264330554983  
Option 3 ID : 264330554986  
Option 4 ID : 264330554984  
Status : Not Answered  
Chosen Option : --

Q.48 The term 'Dribble' is generally associated with\_\_\_\_\_.

- Ans ☒ 1. cricket  
☒ 2. baseball  
☒ 3. basketball  
☒ 4. tennis

Question ID : 264330109729  
Option 1 ID : 264330431195  
Option 2 ID : 264330431193  
Option 3 ID : 264330431194  
Option 4 ID : 264330431196  
Status : Answered  
Chosen Option : 3

Q.49 Which of the following Sultans of Delhi was appointed as Amir-i-Tuzuk (Master of Ceremonies) before becoming the Sultan?

- Ans ☒ 1. Muhammad Bin Tughlaq  
☒ 2. Alauddin Khalji  
☒ 3. Balban  
☒ 4. Iltutmish

Question ID : 264330165362  
Option 1 ID : 264330648527  
Option 2 ID : 264330648529  
Option 3 ID : 264330648528  
Option 4 ID : 264330648530  
Status : Answered  
Chosen Option : 3

Q.50 Who is the author of the book 'The Soul of a Butterfly: Reflections on Life's Journey'?

- Ans ☒ 1. Jake LaMotta  
☒ 2. Eugene J Bullard  
☒ 3. Roberto Duran  
☒ 4. Muhammad Ali

Question ID : 26433071469  
Option 1 ID : 264330280302  
Option 2 ID : 264330280303  
Option 3 ID : 264330280301  
Option 4 ID : 264330280300  
Status : Not Answered  
Chosen Option : --

Section : Quantitative Aptitude

Q.1 Find the fourth proportional of 22, 66 and 11.

- Ans ☒ 1. 23  
☒ 2. 33  
☒ 3. 17  
☒ 4. 39

Question ID : 264330104221  
Option 1 ID : 264330409186  
Option 2 ID : 264330409188  
Option 3 ID : 264330409187  
Option 4 ID : 264330409185  
Status : Answered  
Chosen Option : 2

Q.2 An article is sold at a discount of 25% and an additional discount of 28% is allowed on cash payment. If Ramendra purchased the article by paying ₹10,800 in cash, then what was the marked price of the article?

- Ans ☒ 1. ₹19,800  
☒ 2. ₹20,800  
☒ 3. ₹20,000  
☒ 4. ₹18,000

Question ID : 264330165524  
Option 1 ID : 264330649176  
Option 2 ID : 264330649178  
Option 3 ID : 264330649177  
Option 4 ID : 264330649175  
Status : Answered  
Chosen Option : 3

**Q.3** A shopkeeper marked the price as ₹15,000 on an article, and a successive discount of 5%, 10% and 20% was allowed on it. What is the selling price?

**Ans** ✓ 1. ₹10,260

✗ 2. ₹13,520

✗ 3. ₹11,520

✗ 4. ₹9,850

Question ID : 264330104400

Option 1 ID : 264330409902

Option 2 ID : 264330409904

Option 3 ID : 264330409901

Option 4 ID : 264330409903

Status : Answered

Chosen Option : 1

**Q.4** The value of a washing machine depreciated from ₹40,960 to ₹21,970 in 3 years. Find the yearly rate of depreciation.

**Ans** ✗ 1. 25%

✗ 2. 16.25%

✓ 3. 18.75%

✗ 4. 20%

Question ID : 264330145063

Option 1 ID : 264330568507

Option 2 ID : 264330568508

Option 3 ID : 264330568509

Option 4 ID : 264330568510

Status : Answered

Chosen Option : 3

**Q.5** A and B are equally efficient, and each can individually complete a piece of work in 36 days, if none takes any holiday. A and B started working together on this piece of work, but A took a day off after every five days of work, while B took a day off after every seven days of work. If the duo had started work on 1 July 2021, on which date was the work completed?

**Ans** ✗ 1. 22 July 2021

✗ 2. 19 July 2021

✓ 3. 21 July 2021

✗ 4. 20 July 2021

Question ID : 264330114532

Option 1 ID : 264330450216

Option 2 ID : 264330450215

Option 3 ID : 264330450214

Option 4 ID : 264330450213

Status : Answered

Chosen Option : 3

**Q.6** The radius of a metallic spherical ball is 3 cm. If the metallic ball is melted and recast into x number of hemispheres of radius equal to half the radius of the metallic spherical ball, then find the value of x.

- Ans
- ☒ 1. 15
  - ☒ 2. 14
  - ☒ 3. 16
  - ☒ 4. 13

Question ID : 264330103636  
Option 1 ID : 264330406851  
Option 2 ID : 264330406850  
Option 3 ID : 264330406852  
Option 4 ID : 264330406849  
Status : Answered  
Chosen Option : 3

**Q.7** Some ice pieces, spherical in shape, of diameter 6 cm are dropped in a cylindrical container containing some juice and are fully submerged. If the diameter of the container is 18 cm and level of juice rises by 40 cm, then how many ice pieces are dropped in the container?

- Ans
- ☒ 1. 95
  - ☒ 2. 85
  - ☒ 3. 80
  - ☒ 4. 90

Question ID : 264330145119  
Option 1 ID : 264330568734  
Option 2 ID : 264330568733  
Option 3 ID : 264330568731  
Option 4 ID : 264330568732  
Status : Answered  
Chosen Option : 4

**Q.8** If the slant height of a cone is 29 cm and its height is 20 cm, find the ratio between the magnitudes of total surface area and the volume.

- Ans
- ☒ 1. 5 : 14
  - ☒ 2. 7 : 15
  - ☒ 3. 3 : 7
  - ☒ 4. 3 : 14

Question ID : 264330145106  
Option 1 ID : 264330568682  
Option 2 ID : 264330568680  
Option 3 ID : 264330568681  
Option 4 ID : 264330568679  
Status : Answered  
Chosen Option : 1



Q.9 In  $\triangle ABC$  with sides 8 cm, 9 cm and 12 cm, the angle bisector of the largest angle divides the opposite sides into two segments. What is the length of the shorter segment?

Ans

✓ 1.  $5\frac{11}{17}$  cm

✗ 2.  $4\frac{11}{17}$  cm

✗ 3.  $6\frac{13}{17}$  cm

✗ 4.  $3\frac{9}{17}$  cm

Question ID : 264330170152

Option 1 ID : 264330667283

Option 2 ID : 264330667286

Option 3 ID : 264330667284

Option 4 ID : 264330667285

Status : Answered

Chosen Option : 1

Q.10 If  $\cot^2\theta = 1 - e^2$ , then the value of  $\operatorname{cosec}\theta + \cot^3\theta \sec\theta$  is:

Ans

✗ 1.  $(2 - e^2)^{\frac{1}{2}}$

✗ 2.  $(1 - e^2)^{\frac{3}{2}}$

✗ 3.  $(1 - e^2)$

✓ 4.  $(2 - e^2)^{\frac{3}{2}}$

Question ID : 264330145133

Option 1 ID : 264330568789

Option 2 ID : 264330568787

Option 3 ID : 264330568790

Option 4 ID : 264330568788

Status : Answered

Chosen Option : 4

Q.11 If  $\frac{2 \sin A - \cos A}{\sin A + \cos A} = 1$ , then find the value of  $\cot A$ .

Ans

✗ 1. 1

✓ 2.  $\frac{1}{2}$

✗ 3.  $\frac{1}{3}$

✗ 4. 2

Question ID : 264330157750

Option 1 ID : 264330618359

Option 2 ID : 264330618361

Option 3 ID : 264330618362

Option 4 ID : 264330618360

Status : Answered

Chosen Option : 2

Q.12 A, B and C can do a piece of work in 11 days, 20 days and 55 days respectively. How soon can the work be done if A works with B on first day, A works with C on second day and so on?

- Ans
- ☒ 1.  $8\frac{1}{2}$  days
  - ☒ 2.  $9\frac{1}{2}$  days
  - ☒ 3. 8 days
  - ☒ 4. 9 days

Question ID : 26433082415  
Option 1 ID : 264330323494  
Option 2 ID : 264330323496  
Option 3 ID : 264330323493  
Option 4 ID : 264330323495  
Status : Answered  
Chosen Option : 3

Q.13 Study the given table and answer the question that follows.

Number of children	Number of families
0	4
1	22
2	15
3	6
4	2

The average number of children per family is:

- Ans
- ☒ 1. 1.47
  - ☒ 2. 1.59
  - ☒ 3. 1.23
  - ☒ 4. 1.72

Question ID : 264330145023  
Option 1 ID : 264330568348  
Option 2 ID : 264330568349  
Option 3 ID : 264330568347  
Option 4 ID : 264330568350  
Status : Answered  
Chosen Option : 2

Q.14 A fast local of Mumbai takes 45 minutes less than a slow local for a journey of 150 km. If the speed of the fast local is 10 km/h more than that of the slow local, find the speed (in km/h) of the slow local train.

- Ans
- ☒ 1. 30
  - ☒ 2. 35
  - ☒ 3. 45
  - ☒ 4. 40

Question ID : 264330103988  
Option 1 ID : 264330408253  
Option 2 ID : 264330408254  
Option 3 ID : 264330408256  
Option 4 ID : 264330408255  
Status : Answered  
Chosen Option : 4

Q.15 In a school of 720 students, the ratio of boys to girls is 3 : 5. Find how many new boys may be allowed to the school if 18 new girls are admitted, so that the ratio of boys to girls changes to 2 : 3.

Ans ☒ 1. 42

☐ 2. 44

☐ 3. 50

☐ 4. 38

Question ID : 264330145047

Option 1 ID : 264330568443

Option 2 ID : 264330568445

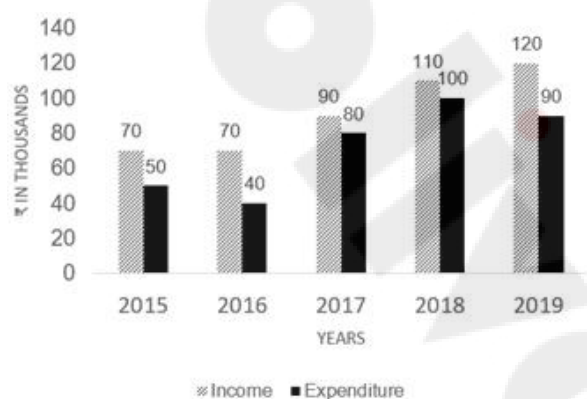
Option 3 ID : 264330568446

Option 4 ID : 264330568444

Status : Answered

Chosen Option : 1

Q.16 The given graph shows the income and expenditure of a family. Study the graph and answer the question that follows.



The expenditure of the family increased by \_\_\_\_\_ from 2017 to 2018.

Ans ☒ 1. 25%

☐ 2. 11%

☐ 3. 22%

☐ 4. 20%

Question ID : 264330165431

Option 1 ID : 264330648803

Option 2 ID : 264330648805

Option 3 ID : 264330648804

Option 4 ID : 264330648806

Status : Answered

Chosen Option : 1

Q.17 Which of the following is the greatest four-digit number that is divisible by 15, 25, 40, and 75?

Ans ☐ 1. 9200

☐ 2. 9500

☒ 3. 9600

☐ 4. 9000

Question ID : 264330145051

Option 1 ID : 264330568460

Option 2 ID : 264330568462

Option 3 ID : 264330568461

Option 4 ID : 264330568459

Status : Answered

Chosen Option : 3

Q.18 What is the average of the first six prime numbers?

Ans

☐ 1.  $6\frac{1}{3}$

☒ 2.  $6\frac{5}{6}$

☐ 3.  $6\frac{2}{3}$

☐ 4.  $6\frac{1}{6}$

Question ID : 264330104485

Option 1 ID : 264330410242

Option 2 ID : 264330410243

Option 3 ID : 264330410244

Option 4 ID : 264330410241

Status : Answered

Chosen Option : 2

Q.19 Ayush spends 25% of an amount of money on an insurance policy, 26% on food, 23% on children's education and 19% on recreation. He deposits the remaining amount of ₹26,600 in the bank. What is the total amount (in ₹) that he spends on food and recreation together?

Ans

☐ 1. 1,95,000

☒ 2. 1,71,000

☐ 3. 1,62,000

☐ 4. 1,83,000

Question ID : 264330158256

Option 1 ID : 264330620383

Option 2 ID : 264330620385

Option 3 ID : 264330620386

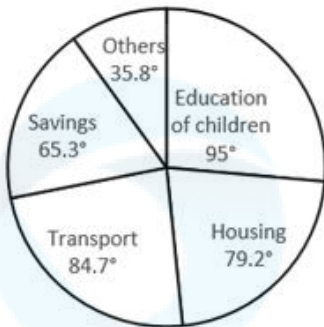
Option 4 ID : 264330620384

Status : Answered

Chosen Option : 2

Q.20 Study the given pie-chart carefully and answer the question that follows.  
Degree wise Break-up of Expenditure of a Family in a Month

Total Amount Spent In a  
Month = ₹56800.



What is the amount spent by the family on housing?

- Ans
- ☒ 1. ₹11,814
  - ☒ 2. ₹6,248
  - ☒ 3. ₹10,615
  - ☒ 4. ₹12,496

Question ID : 264330165434

Option 1 ID : 264330648815

Option 2 ID : 264330648818

Option 3 ID : 264330648817

Option 4 ID : 264330648816

Status : Answered

Chosen Option : 4

Q.21 The number of balls, each one is 4 cm in the diameter that can be made from a solid metallic sphere of diameter 32 cm is:

- Ans
- ☒ 1. 256
  - ☒ 2. 64
  - ☒ 3. 512
  - ☒ 4. 1024

Question ID : 264330165654

Option 1 ID : 264330649697

Option 2 ID : 264330649695

Option 3 ID : 264330649696

Option 4 ID : 264330649698

Status : Answered

Chosen Option : 3

Q.22 Simplify the given expression.

$$b + 2a - [(3b + a) - (2a + b) + 2a] - a$$

- Ans
- ☒ 1.  $-a$
  - ☒ 2.  $b$
  - ☒ 3.  $-b$
  - ☒ 4.  $a$

Question ID : 264330157761

Option 1 ID : 264330618406

Option 2 ID : 264330618403

Option 3 ID : 264330618404

Option 4 ID : 264330618405

Status : Answered

Chosen Option : 3

Q.23 In a store, Arun has two options to buy a mobile phone, either he can pay the full amount of Rs.2,500 or he may buy at an instalment scheme, i.e. Rs.520 in down payment and four equal instalments, rate of interest being charged at 25% p.a. simple interest. Arun buys a mobile phone on the instalment scheme. What is the monthly instalment for Arun?

- Ans
- ☒ 1. Rs.510
  - ☒ 2. Rs.530
  - ☒ 3. Rs.550
  - ☒ 4. Rs.520

Question ID : 26433063339

Option 1 ID : 264330248011

Option 2 ID : 264330248008

Option 3 ID : 264330248009

Option 4 ID : 264330248010

Status : Answered

Chosen Option : 3

Q.24 In a 1200 m race, Rakesh reaches the final point in 36 seconds and Rajesh reaches in 40 sec. By how much distance does Rakesh beat Rajesh?

- Ans
- ☒ 1. 130 m
  - ☒ 2. 120 m
  - ☒ 3. 140 m
  - ☒ 4. 150 m

Question ID : 264330145065

Option 1 ID : 264330568516

Option 2 ID : 264330568515

Option 3 ID : 264330568517

Option 4 ID : 264330568518

Status : Answered

Chosen Option : 2

Q.25 Rakesh runs a coaching institute having 50 faculty members. The average monthly salary of 35 faculty members is ₹37,500. What will be the average monthly salary (in ₹) of the other 15 faculty members, if the average monthly salary of all the 50 faculty members is found to be ₹30,000?

- Ans
- ☒ 1. 13,000
  - ☒ 2. 13,500
  - ☒ 3. 12,500
  - ☒ 4. 12,000

Question ID : 264330165667  
Option 1 ID : 264330649749  
Option 2 ID : 264330649750  
Option 3 ID : 264330649748  
Option 4 ID : 264330649747

Status : Answered

Chosen Option : 3

Q.26 If  $\sin\theta + \cos\theta = \sqrt{2} \cos\theta$ , then find  $\frac{\sin\theta - \cos\theta}{\sin\theta}$  :

- Ans
- ☒ 1.  $-\sqrt{2}$
  - ☒ 2. -1
  - ☒ 3. 1
  - ☒ 4.  $\sqrt{2}$

Question ID : 264330158420  
Option 1 ID : 264330621042  
Option 2 ID : 264330621040  
Option 3 ID : 264330621039  
Option 4 ID : 264330621041

Status : Answered

Chosen Option : 1

Q.27 Ankita sold three toys. The first toy was sold for ₹1,500 at a profit of 25%; the second toy was sold for ₹2,800 at a loss of 50% and the third toy was sold for ₹3,500 at a profit of 25%. Find her total profit or loss percentage.

- Ans
- ☒ 1. 15.25% loss
  - ☒ 2. 15.25% profit
  - ☒ 3. 18.75% profit
  - ☒ 4. 18.75% loss

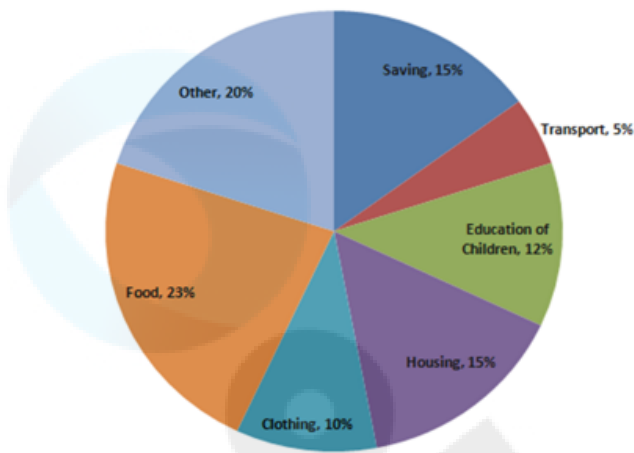
Question ID : 264330131457  
Option 1 ID : 264330514932  
Option 2 ID : 264330514931  
Option 3 ID : 264330514933  
Option 4 ID : 264330514934

Status : Answered

Chosen Option : 4

Q.28 Study the given pie-chart and answer the question that follows.

The pie-chart shows the expenditure of a family on different items and their savings throughout the year 2021.



If the total income for the year was ₹1,00,000, then the difference in the expenses (in ₹) between housing and transport was:

- Ans
- ☒ 1. 9,500
  - ☒ 2. 10,500
  - ☒ 3. 9,000
  - ☒ 4. 10,000

Question ID : 264330163476

Option 1 ID : 264330641164

Option 2 ID : 264330641166

Option 3 ID : 264330641163

Option 4 ID : 264330641165

Status : Answered

Chosen Option : 4

Q.29 Simplify the given expression.

$$(x - 2y)(y - 3x) + (x + y)(x - y) + (x - 3y)(2x + y)$$

- Ans
- ☒ 1.  $2y(x - 3y)$
  - ☒ 2.  $2y(x + 3y)$
  - ☒ 3.  $2x(x - 3y)$
  - ☒ 4.  $2x(x + 3y)$

Question ID : 264330157774

Option 1 ID : 264330618456

Option 2 ID : 264330618458

Option 3 ID : 264330618455

Option 4 ID : 264330618457

Status : Answered

Chosen Option : 1



Q.30 The least number of five digits which is exactly divisible by 9, 12, 15, 25 and 27 is:

- Ans ☒ 1. 10800  
☒ 2. 10250  
☒ 3. 10700  
☒ 4. 10600

Question ID : 26433064889  
Option 1 ID : 264330254149  
Option 2 ID : 264330254151  
Option 3 ID : 264330254150  
Option 4 ID : 264330254148  
Status : Answered  
Chosen Option : 1

Q.31 The LCM of two numbers is five times their HCF. If the product of the two numbers is 20480, then find their HCF and LCM, respectively.

- Ans ☒ 1. 46 and 230  
☒ 2. 48 and 240  
☒ 3. 64 and 320  
☒ 4. 56 and 280

Question ID : 26433065040  
Option 1 ID : 264330254753  
Option 2 ID : 264330254754  
Option 3 ID : 264330254752  
Option 4 ID : 264330254755  
Status : Answered  
Chosen Option : 3

Q.32 Find the HCF of 125, 250 and 750.

- Ans ☒ 1. 50  
☒ 2. 25  
☒ 3. 125  
☒ 4. 75

Question ID : 26433065033  
Option 1 ID : 264330254725  
Option 2 ID : 264330254724  
Option 3 ID : 264330254727  
Option 4 ID : 264330254726  
Status : Answered  
Chosen Option : 3

Q.33 The LCM of 8, 12 and 18 is:

- Ans ☒ 1. 24  
☒ 2. 80  
☒ 3. 72  
☒ 4. 36

Question ID : 264330145079  
Option 1 ID : 264330568571  
Option 2 ID : 264330568574  
Option 3 ID : 264330568573  
Option 4 ID : 264330568572  
Status : Answered  
Chosen Option : 3

Q.34 Study the given table and answer the question that follows.

The table shows the number of employees in three organisations during three years.

Year Organization	2018	2019	2020
P	75	69	85
Q	96	81	74
R	85	63	90

What is the respective ratio between total number of employees in organisations P and R together in 2019 and total number of employees in organisations Q and R together in 2020?

- Ans
- ☒ 1. 23 : 41
  - ☒ 2. 33 : 41
  - ☒ 3. 41 : 31
  - ☒ 4. 33 : 23

Question ID : 264330158264  
Option 1 ID : 264330620415  
Option 2 ID : 264330620418  
Option 3 ID : 264330620417  
Option 4 ID : 264330620416  
Status : Answered  
Chosen Option : 2

Q.35 The ratio of monthly income and expenditure of a man is 7:3. If his expenditure is ₹5,400, find his monthly income.

- Ans
- ☒ 1. ₹12,600
  - ☒ 2. ₹13,300
  - ☒ 3. ₹11,500
  - ☒ 4. ₹10,400

Question ID : 264330145070  
Option 1 ID : 264330568537  
Option 2 ID : 264330568538  
Option 3 ID : 264330568536  
Option 4 ID : 264330568535  
Status : Answered  
Chosen Option : 1

Q.36 If 30% of Ravi's income is equal to 40% of Suresh's income, then 50% of Ravi's income is equal to what percentage of Suresh's income?

- Ans
- ☒ 1.  $66\frac{1}{3}\%$
  - ☒ 2.  $33\frac{1}{3}\%$
  - ☒ 3.  $33\frac{2}{3}\%$
  - ☒ 4.  $66\frac{2}{3}\%$

Question ID : 264330103394

Option 1 ID : 264330405882

Option 2 ID : 264330405883

Option 3 ID : 264330405884

Option 4 ID : 264330405881

Status : Answered

Chosen Option : 4

Q.37 If Arun can complete  $\frac{2}{3}$  rd of a work in 12 days, then in how many days can he complete  $\frac{1}{6}$  th of the same work?

- Ans
- ☒ 1. 3
  - ☒ 2. 4
  - ☒ 3. 5
  - ☒ 4. 2

Question ID : 264330101377

Option 1 ID : 264330398056

Option 2 ID : 264330398055

Option 3 ID : 264330398054

Option 4 ID : 264330398053

Status : Answered

Chosen Option : 1

Q.38 The chord of a circle is equal to its radius. Find the difference between the angle subtended by this chord at the minor arc and major arc of the circle.

- Ans
- ☒ 1.  $30^\circ$
  - ☒ 2.  $120^\circ$
  - ☒ 3.  $60^\circ$
  - ☒ 4.  $150^\circ$

Question ID : 264330165539

Option 1 ID : 264330649235

Option 2 ID : 264330649236

Option 3 ID : 264330649237

Option 4 ID : 264330649238

Status : Answered

Chosen Option : 2

Q.39 The length of the common chord of two intersecting circles is 24 cm. If the diameter of the circles are 30 cm and 26 cm, then the distance between the centres (in cm) is:

- Ans ☒ 1. 16 cm  
☒ 2. 14 cm  
☒ 3. 18 cm  
☒ 4. 12 cm

Question ID : 264330170155  
Option 1 ID : 264330667296  
Option 2 ID : 264330667298  
Option 3 ID : 264330667297  
Option 4 ID : 264330667295  
Status : Answered  
Chosen Option : 2

Q.40 Study the given table and answer the question that follows.  
The table shows the number of students in various courses in various cities A, B, C, D and E in India during the academic year 2022-2023.

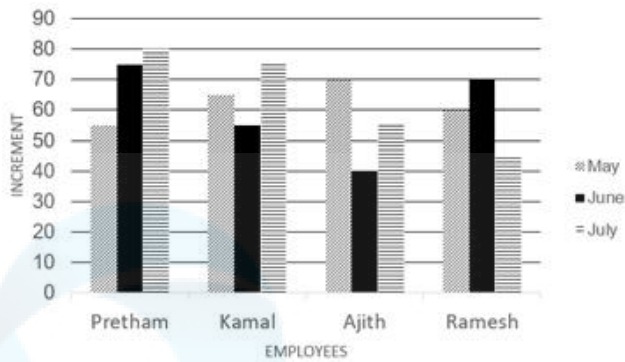
City	MBA	Science	Engineering	Medicine	MCA	Total
A	1200	2560	4520	1100	960	10340
B	1350	2650	5100	1050	850	11000
C	1250	2640	4580	1120	750	10340
D	1960	1250	3500	1850	1600	10160
E	1200	2100	3500	960	540	8300

During the academic year 2022-2023, which city had the largest number of students?

- Ans ☒ 1. C  
☒ 2. D  
☒ 3. A  
☒ 4. B

Question ID : 264330157714  
Option 1 ID : 264330618217  
Option 2 ID : 264330618218  
Option 3 ID : 264330618215  
Option 4 ID : 264330618216  
Status : Answered  
Chosen Option : 4

Q.41 Study the given bar graph carefully and answer the question that follows. Increment of four employees (in ₹) in the months of May, June and July.



What is Kamal's overall average increment in three months?

- Ans
- ☒ 1. ₹60
  - ☒ 2. ₹70
  - ☒ 3. ₹75
  - ☒ 4. ₹65

Question ID : 264330165427

Option 1 ID : 264330648788

Option 2 ID : 264330648790

Option 3 ID : 264330648789

Option 4 ID : 264330648787

Status : Answered

Chosen Option : 4

Q.42 A hollow cylindrical tube made of plastic is 3 cm thick. If the external diameter is 20 cm and length of the tube is 49 cm, find the volume of the plastic.

- Ans
- ☒ 1. 7238 cm<sup>3</sup>
  - ☒ 2. 7644 cm<sup>3</sup>
  - ☒ 3. 7546 cm<sup>3</sup>
  - ☒ 4. 7854 cm<sup>3</sup>

Question ID : 264330103644

Option 1 ID : 264330406882

Option 2 ID : 264330406884

Option 3 ID : 264330406881

Option 4 ID : 264330406883

Status : Answered

Chosen Option : 4

Q.43 The value of  $2\tan^2 45^\circ + \cos^2 30^\circ - \sin^2 60^\circ$  is:

- Ans
- ☒ 1. 2
  - ☒ 2. 1
  - ☒ 3. -1
  - ☒ 4. -2

Question ID : 264330157752

Option 1 ID : 264330618368

Option 2 ID : 264330618367

Option 3 ID : 264330618369

Option 4 ID : 264330618370

Status : Answered

Chosen Option : 1

Q.44 A shopkeeper sells sugar at ₹40 per kg, which he purchased at ₹36 per kg. His weighing machine is faulty and it weighs only 800 gm while selling. His percentage profit (correct to 2 decimal places) is:

- Ans
- ☒ 1. 37.58%
  - ☒ 2. 40%
  - ☒ 3. 39.28%
  - ☒ 4. 38.89%

Question ID : 26433099045  
Option 1 ID : 264330388820  
Option 2 ID : 264330388817  
Option 3 ID : 264330388818  
Option 4 ID : 264330388819  
Status : Answered  
Chosen Option : 4

Q.45  $\Delta PQR$  is right angled at Q such that  $PQ=(x-y)$ ,  $QR=x$  and  $PR=(x+y)$ . S is a point on QR such that  $QS=PQ$ . The ratio  $QS:SR$  for any values of x and y is:

- Ans
- ☒ 1. 3 : 1
  - ☒ 2. 2 : 1
  - ☒ 3. 1 : 2
  - ☒ 4. 1 : 3

Question ID : 264330158286  
Option 1 ID : 264330620503  
Option 2 ID : 264330620505  
Option 3 ID : 264330620506  
Option 4 ID : 264330620504  
Status : Not Answered  
Chosen Option : --

Q.46 The following table represents the number of scooters sold by 5 stores in 4 different months in the year 2022.

Months \ Stores	Stores				
	A	B	C	D	E
January	212	168	173	182	190
February	312	250	212	175	182
March	280	275	265	255	245
April	270	280	290	305	275

Find the ratio between the total number of scooters sold by stores A and B together in January and the total number of scooters sold by stores D and E together in March?

- Ans
- ☒ 1. 20 : 23
  - ☒ 2. 18 : 23
  - ☒ 3. 17 : 25
  - ☒ 4. 19 : 25

Question ID : 264330167250  
Option 1 ID : 264330655996  
Option 2 ID : 264330655997  
Option 3 ID : 264330655998  
Option 4 ID : 264330655995  
Status : Answered  
Chosen Option : 4

Q.47 A man covers a certain distance by bike. If he covers 25% of the distance at the speed of 25 km/h, 50% of the distance at the speed of 50 km/h and the remaining distance at the speed of 12.5 km/h, find his average speed over the whole journey.

- Ans
- ☒ 1. 20 km/h
  - ☒ 2. 30 km/h
  - ☒ 3. 25 km/h
  - ☒ 4. 35 km/h

Question ID : 26433063952  
Option 1 ID : 264330250400  
Option 2 ID : 264330250402  
Option 3 ID : 264330250401  
Option 4 ID : 264330250403  
Status : Answered  
Chosen Option : 3

Q.48 If the sum of two numbers is 60 and their HCF and LCM are 5 and 60, respectively, then the sum of the reciprocals of the numbers will be:

- Ans
- ☒ 1.  $\frac{1}{11}$
  - ☒ 2.  $\frac{1}{6}$
  - ☒ 3.  $\frac{1}{4}$
  - ☒ 4.  $\frac{1}{5}$

Question ID : 26433096373  
Option 1 ID : 264330378232  
Option 2 ID : 264330378231  
Option 3 ID : 264330378229  
Option 4 ID : 264330378230  
Status : Answered  
Chosen Option : 4

Q.49 The following table gives the number of different types of batteries sold by a company over the years (numbers in hundreds).

Type of battery \ Year	7AH	32AH	35AH	55AH
2018	20	30	40	50
2019	40	35	45	45
2020	50	40	40	40
2021	40	50	50	45
2022	45	45	35	55

What is the difference in the number of 7AH batteries sold in 2021 and 2022?

- Ans
- ☒ 1. 200
  - ☒ 2. 700
  - ☒ 3. 300
  - ☒ 4. 500

Question ID : 264330167252  
Option 1 ID : 264330656003  
Option 2 ID : 264330656006  
Option 3 ID : 264330656004  
Option 4 ID : 264330656005  
Status : Answered  
Chosen Option : 4

**Q.50** The HCF and LCM of two numbers are 9 and 126, respectively. Find the larger number, if the ratio between the numbers is 2 : 7.

- Ans ☒ 1. 42  
☒ 2. 63  
☒ 3. 77  
☒ 4. 21

Question ID : 26433063284  
Option 1 ID : 264330247790  
Option 2 ID : 264330247789  
Option 3 ID : 264330247791  
Option 4 ID : 264330247788  
Status : Answered  
Chosen Option : 2

Section : English Comprehension

**Q.1** Select the most appropriate option that can substitute the underlined segment in the given sentence.

The concert was filled with rapt teenage listeners.

- Ans ☒ 1. really fashionable  
☒ 2. boldly dressed  
☒ 3. truly energetic  
☒ 4. fully attentive

Question ID : 26433099880  
Option 1 ID : 264330392109  
Option 2 ID : 264330392112  
Option 3 ID : 264330392110  
Option 4 ID : 264330392111  
Status : Answered  
Chosen Option : 3

**Q.2** Select the most appropriate ANTONYM of the given word.  
Decline

- Ans ☒ 1. Escape  
☒ 2. Ascend  
☒ 3. Demonstrate  
☒ 4. Traverse

Question ID : 26433099652  
Option 1 ID : 264330391214  
Option 2 ID : 264330391216  
Option 3 ID : 264330391213  
Option 4 ID : 264330391215  
Status : Answered  
Chosen Option : 2



**Q.3** Select the most appropriate option that can substitute the underlined segment in the given sentence. If there is no need to substitute it, select 'No substitution required'.  
It was a quite afternoon, so Dan decided to take a nap.

- Ans
- ☒ 1. an quiet
  - ☒ 2. an quite
  - ☒ 3. No substitution required
  - ☒ 4. a quiet

Question ID : 26433070770  
Option 1 ID : 264330277538  
Option 2 ID : 264330277536  
Option 3 ID : 264330277539  
Option 4 ID : 264330277537  
Status : Answered  
Chosen Option : 3

**Q.4** Select the most appropriate option to fill in the blank.  
This is not \_\_\_\_\_ exhaustive list of words.

- Ans
- ☒ 1. many
  - ☒ 2. an
  - ☒ 3. a
  - ☒ 4. No word required

Question ID : 264330145275  
Option 1 ID : 264330569355  
Option 2 ID : 264330569357  
Option 3 ID : 264330569356  
Option 4 ID : 264330569358  
Status : Answered  
Chosen Option : 2

**Q.5** Select the most appropriate meaning of the highlighted idiom in the given sentence.

She said she liked my hair, but it turned out to be a left handed compliment.

- Ans
- ☒ 1. A joke
  - ☒ 2. A flattery
  - ☒ 3. An insult
  - ☒ 4. A praise

Question ID : 264330108898  
Option 1 ID : 264330427870  
Option 2 ID : 264330427871  
Option 3 ID : 264330427872  
Option 4 ID : 264330427869  
Status : Answered  
Chosen Option : 3

Q.6 Select the most appropriate ANTONYM of the given word.

Redemption

- Ans ☒ 1. Salvation  
☒ 2. Blasphemy  
☒ 3. Corrugation  
☒ 4. Conjunction

Question ID : 264330163398  
Option 1 ID : 264330640871  
Option 2 ID : 264330640872  
Option 3 ID : 264330640873  
Option 4 ID : 264330640874  
Status : Answered  
Chosen Option : 2

Q.7 Parts of the following sentence have been underlined and given as options. Select the option that contains an error.

Have they been work in that particular shop for several years?

- Ans ☒ 1. work  
☒ 2. been  
☒ 3. for  
☒ 4. Have

Question ID : 26433089373  
Option 1 ID : 264330350995  
Option 2 ID : 264330350994  
Option 3 ID : 264330350996  
Option 4 ID : 264330350993  
Status : Answered  
Chosen Option : 1

Q.8 Select the correct spelling of the incorrectly spelt word.

He had a round face made jovial by bright, almost boyish eyes and eyebrows  
ridiculusly small for a man his size.

- Ans ☒ 1. ridicolusly  
☒ 2. jouvial  
☒ 3. juvial  
☒ 4. ridiculously

Question ID : 26433088981  
Option 1 ID : 264330349463  
Option 2 ID : 264330349462  
Option 3 ID : 264330349464  
Option 4 ID : 264330349461  
Status : Answered  
Chosen Option : 4

**Q.9** Select the word segment that substitutes (replaces) the bracketed word segment correctly and completes the sentence meaningfully:  
Unless you (do will not prepare) well you will not perform well.

- Ans ☒ 1. would not prepare
- ☒ 2. prepare
- ☒ 3. will do not prepare
- ☒ 4. will prepare

Question ID : 26433088800  
Option 1 ID : 264330348756  
Option 2 ID : 264330348754  
Option 3 ID : 264330348753  
Option 4 ID : 264330348755  
Status : Answered  
Chosen Option : 2

**Q.10** Select the most appropriate meaning of the given idiom.

**Bite the bullet**

- Ans ☒ 1. Decide to do what is good
- ☒ 2. To bite something very hard
- ☒ 3. Decide to do the inevitable which you were avoiding
- ☒ 4. Decide to take the easier way out

Question ID : 264330163380  
Option 1 ID : 264330640808  
Option 2 ID : 264330640807  
Option 3 ID : 264330640809  
Option 4 ID : 264330640810  
Status : Answered  
Chosen Option : 3

**Q.11** Select the most appropriate ANTONYM of the given word.  
**Resolute**

- Ans ☒ 1. Serious
- ☒ 2. Wavering
- ☒ 3. Steadfast
- ☒ 4. Brave

Question ID : 26433098994  
Option 1 ID : 264330388620  
Option 2 ID : 264330388618  
Option 3 ID : 264330388617  
Option 4 ID : 264330388619  
Status : Answered  
Chosen Option : 2

Q.12 The following sentence has been split into four segments. Identify the segment that contains a grammatical error.

Roger went / to an United Kingdom / with his wife / to celebrate Christmas.

- Ans ☒ 1. Roger went  
☒ 2. to an United Kingdom  
☒ 3. to celebrate Christmas  
☒ 4. with his wife

Question ID : 264330120603  
Option 1 ID : 264330472651  
Option 2 ID : 264330472652  
Option 3 ID : 264330472654  
Option 4 ID : 264330472653  
Status : Answered  
Chosen Option : 2

Q.13 Some words in the following sentences have been underlined and given as options.  
Select the option that contains a spelling error.  
Why is everyone so dressed up? What's the occaseon? Is it a wedding?

- Ans ☒ 1. wedding  
☒ 2. occaseon  
☒ 3. everyone  
☒ 4. dressed

Question ID : 264330121269  
Option 1 ID : 264330475282  
Option 2 ID : 264330475281  
Option 3 ID : 264330475279  
Option 4 ID : 264330475280  
Status : Answered  
Chosen Option : 2

Q.14 Select the option that can be used as a one-word substitute for the given group of words.  
To restrain or compel a person to do something by force.

- Ans ☒ 1. Convoy  
☒ 2. Consensus  
☒ 3. Coerce  
☒ 4. Casualty

Question ID : 26433088803  
Option 1 ID : 264330348765  
Option 2 ID : 264330348767  
Option 3 ID : 264330348768  
Option 4 ID : 264330348766  
Status : Answered  
Chosen Option : 3

Q.15 Select the most appropriate option that can substitute the underlined segment in the given sentence.

Health insurance are important today since anyone can face a medical emergency without warning.

- Ans
- ☒ 1. will be important
  - ☒ 2. has been important
  - ☒ 3. was important
  - ☒ 4. is important

Question ID : 26433081324  
Option 1 ID : 264330319141  
Option 2 ID : 264330319144  
Option 3 ID : 264330319143  
Option 4 ID : 264330319142  
Status : Answered  
Chosen Option : 4

Q.16 Select the most appropriate meaning of the given idiom.  
Spill the beans

- Ans
- ☒ 1. To make anything visible
  - ☒ 2. To reveal secret information
  - ☒ 3. To ruin someone's plan
  - ☒ 4. To talk randomly

Question ID : 264330117235  
Option 1 ID : 264330460998  
Option 2 ID : 264330461000  
Option 3 ID : 264330460999  
Option 4 ID : 264330460997  
Status : Answered  
Chosen Option : 2

Q.17 Select the option that will improve the underlined part of the given sentence.  
People say different things at different times.

- Ans
- ☒ 1. should say fanciful things at different times
  - ☒ 2. says delectable things at different times
  - ☒ 3. says whimsical things at different times
  - ☒ 4. say diverse things at different times

Question ID : 264330145289  
Option 1 ID : 264330569413  
Option 2 ID : 264330569412  
Option 3 ID : 264330569411  
Option 4 ID : 264330569414  
Status : Answered  
Chosen Option : 4

Q.18 Select the most appropriate ANTONYM of the given word.  
Together

- Ans ☒ 1. Apart  
☐ 2. United  
☐ 3. Freight  
☐ 4. Engulf

Question ID : 264330164274  
Option 1 ID : 264330644320  
Option 2 ID : 264330644319  
Option 3 ID : 264330644322  
Option 4 ID : 264330644321  
Status : Answered  
Chosen Option : 1

Q.19 Select the most appropriate ANTONYM of the given word.  
Magnificent

- Ans ☐ 1. Impressive  
☐ 2. Peaceful  
☐ 3. Quiet  
☒ 4. Modest

Question ID : 264330164171  
Option 1 ID : 264330643936  
Option 2 ID : 264330643937  
Option 3 ID : 264330643938  
Option 4 ID : 264330643935  
Status : Answered  
Chosen Option : 4

Q.20 Select the most appropriate idiom to fill in the blank.  
I have all the technical and communication skills necessary to crack any interview; it  
will be \_\_\_\_\_.

- Ans ☐ 1. a storm in a tea cup  
☐ 2. a chip on my shoulder  
☐ 3. a hard nut to crack  
☒ 4. a piece of cake for me

Question ID : 264330134220  
Option 1 ID : 264330525878  
Option 2 ID : 264330525876  
Option 3 ID : 264330525875  
Option 4 ID : 264330525877  
Status : Answered  
Chosen Option : 4

**Q.21** Select the most appropriate idiom for the underlined word segment.  
He seems to be undecided about whether to move to another city for better prospects.

- Ans
- ☒ 1. Bouncing off the walls
  - ☒ 2. Running out of steam
  - ☒ 3. Sitting on the fence
  - ☒ 4. Counting down the days

Question ID : 264330167999  
Option 1 ID : 264330658888  
Option 2 ID : 264330658890  
Option 3 ID : 264330658889  
Option 4 ID : 264330658887  
Status : Answered  
Chosen Option : 3

**Q.22** The following sentence has been split into four segments. Identify the segment that contains a grammatical error.

I have a dog and a cow. / A dog is black / but the cow is / black and white.

- Ans
- ☒ 1. A dog is black
  - ☒ 2. black and white
  - ☒ 3. but the cow is
  - ☒ 4. I have a dog and a cow

Question ID : 264330120602  
Option 1 ID : 264330472648  
Option 2 ID : 264330472650  
Option 3 ID : 264330472649  
Option 4 ID : 264330472647  
Status : Answered  
Chosen Option : 1

**Q.23** Select the most appropriate synonym of the underlined word.  
Improved rail transport is essential for business.

- Ans
- ☒ 1. Recommended
  - ☒ 2. Trivial
  - ☒ 3. Crucial
  - ☒ 4. Technical

Question ID : 264330117332  
Option 1 ID : 264330461381  
Option 2 ID : 264330461384  
Option 3 ID : 264330461383  
Option 4 ID : 264330461382  
Status : Answered  
Chosen Option : 3

Q.24 Select the most appropriate synonym of the given word.

Desolate

- Ans ☒ 1. Fortunate  
☒ 2. Sturdy  
☒ 3. Depressive  
☒ 4. Hopeful

Question ID : 264330163331  
Option 1 ID : 264330640623  
Option 2 ID : 264330640626  
Option 3 ID : 264330640625  
Option 4 ID : 264330640624  
Status : Answered  
Chosen Option : 3

Q.25 Select the option that can be used as a one-word substitute for the given group of words.

An act of exchanging information

- Ans ☒ 1. Collaboration  
☒ 2. Communication  
☒ 3. Touch  
☒ 4. Hold

Question ID : 26433088440  
Option 1 ID : 264330347348  
Option 2 ID : 264330347345  
Option 3 ID : 264330347347  
Option 4 ID : 264330347346  
Status : Answered  
Chosen Option : 2

Q.26 Select the correct spelling of the incorrectly spelt word.

They were more often abnoxious than not, impatient with me because my services had been essentially imposed upon them.

- Ans ☒ 1. obnoxious  
☒ 2. impatint  
☒ 3. servises  
☒ 4. essentialy

Question ID : 26433088984  
Option 1 ID : 264330349475  
Option 2 ID : 264330349473  
Option 3 ID : 264330349474  
Option 4 ID : 264330349476  
Status : Answered  
Chosen Option : 1



Q.27 Select the most appropriate ANTONYM of the underlined word in the given sentence.

All members of the association adhere to a strict code of practice.

- Ans ☒ 1. observe  
☒ 2. cling  
☒ 3. flout  
☒ 4. comply

Question ID : 264330117116  
Option 1 ID : 264330460534  
Option 2 ID : 264330460536  
Option 3 ID : 264330460535  
Option 4 ID : 264330460533  
Status : Answered  
Chosen Option : 3

Q.28 Select the most appropriate ANTONYM for the highlighted word.  
She has a penchant for art and craft.

- Ans ☒ 1. anxiety  
☒ 2. hatred  
☒ 3. fear  
☒ 4. joy

Question ID : 264330120739  
Option 1 ID : 264330473173  
Option 2 ID : 264330473171  
Option 3 ID : 264330473174  
Option 4 ID : 264330473172  
Status : Answered  
Chosen Option : 2

Q.29 Select the most appropriate option that can substitute the underlined segment in the given sentence.

The team leader tried to remain positive or optimistic in the situation, even though they were facing tough competition and limited resources.

- Ans ☒ 1. to put a strong hand forward  
☒ 2. to put on a strong exterior  
☒ 3. to put a strong desire in front of  
☒ 4. to put a brave face on

Question ID : 264330139271  
Option 1 ID : 264330545600  
Option 2 ID : 264330545601  
Option 3 ID : 264330545599  
Option 4 ID : 264330545602  
Status : Answered  
Chosen Option : 4

Q.30 Select the most appropriate ANTONYM of the given word.  
Superb

- Ans ☒ 1. Infallible  
☒ 2. Incurable  
☒ 3. Inferior  
☒ 4. Splendid

Question ID : 264330164275  
Option 1 ID : 264330644325  
Option 2 ID : 264330644324  
Option 3 ID : 264330644326  
Option 4 ID : 264330644323  
Status : Answered  
Chosen Option : 3

Q.31 Choose the most appropriate meaning of the underlined phrase.  
He was carried off his feet when he was declared to have won the prize.

- Ans ☒ 1. Was wild with excitement  
☒ 2. Was dizzy  
☒ 3. Became delirious  
☒ 4. Danced on his toes

Question ID : 264330137452  
Option 1 ID : 264330538432  
Option 2 ID : 264330538433  
Option 3 ID : 264330538434  
Option 4 ID : 264330538431  
Status : Answered  
Chosen Option : 1

Q.32 Select the most appropriate phrasal verb to fill in the blank.  
It took seven years for Harish to \_\_\_\_\_ his migraine.

- Ans ☒ 1. shake down  
☒ 2. shake up  
☒ 3. shake out  
☒ 4. shake off

Question ID : 26433084920  
Option 1 ID : 264330333403  
Option 2 ID : 264330333404  
Option 3 ID : 264330333401  
Option 4 ID : 264330333402  
Status : Answered  
Chosen Option : 3

**Q.33** Select the most appropriate meaning of the underlined idiom that can be substituted in the following sentence.

The new routine will suit you to a T.

- Ans
- ☒ 1. nicely
  - ☒ 2. a little bit
  - ☒ 3. exactly
  - ☒ 4. very poorly

Question ID : 26433094760  
Option 1 ID : 264330371873  
Option 2 ID : 264330371876  
Option 3 ID : 264330371874  
Option 4 ID : 264330371875  
Status : Answered  
Chosen Option : 3

**Q.34** Select the most appropriate meaning of the given idiom.

Spill the beans

- Ans
- ☒ 1. Sound familiar
  - ☒ 2. Fail to make an impact
  - ☒ 3. To be very expensive
  - ☒ 4. Give away a secret

Question ID : 26433091830  
Option 1 ID : 264330360659  
Option 2 ID : 264330360657  
Option 3 ID : 264330360660  
Option 4 ID : 264330360658  
Status : Answered  
Chosen Option : 4

**Q.35** Replace the underlined segment with the most appropriate idiom/phrase from the following options.

This is the critical point of the issue. One should always be focused on it.

- Ans
- ☒ 1. Chip off the old block
  - ☒ 2. A black sheep
  - ☒ 3. The crux of the matter
  - ☒ 4. Don't cry over spilt milk

Question ID : 26433091834  
Option 1 ID : 264330360673  
Option 2 ID : 264330360675  
Option 3 ID : 264330360676  
Option 4 ID : 264330360674  
Status : Answered  
Chosen Option : 3

Q.36 Select the most appropriate option that can substitute the underlined segment in the given sentence.  
I like all games instead of cricket.

- Ans ☒ 1. rather  
☒ 2. exclude  
☒ 3. object  
☒ 4. except

Question ID : 26433098974  
Option 1 ID : 264330388548  
Option 2 ID : 264330388545  
Option 3 ID : 264330388546  
Option 4 ID : 264330388547  
Status : Answered  
Chosen Option : 4

Q.37 Select the option that can be used as a one-word substitute for the given group of words.

Requiring exceptional skill or caution in performance or handling

- Ans ☒ 1. Blunt  
☒ 2. Tricky  
☒ 3. Sustainable  
☒ 4. Abstract

Question ID : 26433088447  
Option 1 ID : 264330347376  
Option 2 ID : 264330347374  
Option 3 ID : 264330347375  
Option 4 ID : 264330347373  
Status : Answered  
Chosen Option : 2

Q.38 The following sentence has been divided into parts. One of them may contain an error. Select the part that contains the error from the given options. If you don't find any error, mark 'No error' as your answer.  
(1) He could / (2) be pass his exams / (3) if he studied harder. / (4) No error

- Ans ☒ 1. 2  
☒ 2. 1  
☒ 3. 3  
☒ 4. 4

Question ID : 264330164351  
Option 1 ID : 264330644616  
Option 2 ID : 264330644615  
Option 3 ID : 264330644617  
Option 4 ID : 264330644618  
Status : Answered  
Chosen Option : 1

**Q.39** Select the most appropriate option that can substitute the underlined word which has been incorrectly spelt.  
They have begun to study in sepparate rooms.

**Ans** ☒ 1. saperate

☒ 2. separate

☒ 3. seprate

☒ 4. saparate

Question ID : 264330123043

Option 1 ID : 264330482238

Option 2 ID : 264330482236

Option 3 ID : 264330482235

Option 4 ID : 264330482237

Status : Answered

Chosen Option : 2

**Q.40** Select the sentence that has a spelling error.

A- One has to understand the rudimentery fact that intelligence and intellect are at two opposite poles.

B- An intellectual person may have all the knowledge of the world but won't know how to give it a shape.

C- Knowledge will plague the individual if he does not have the intelligence to express it.

D- Without basic intelligence, an individual is trapped within himself manifesting conflicts and ignorance in the external world.

**Ans** ☒ 1. Without basic intelligence, an individual is trapped within himself, manifesting conflicts and ignorance in the external world.

☒ 2. An intellectual person may have all the knowledge of the world but won't know how to give it a shape.

☒ 3. Knowledge will plague the individual if he does not have the intelligence to express it.

☒ 4. One has to understand the rudimentery fact that intelligence and intellect are at two opposite poles.

Question ID : 264330141562

Option 1 ID : 264330554586

Option 2 ID : 264330554584

Option 3 ID : 264330554585

Option 4 ID : 264330554583

Status : Answered

Chosen Option : 4

Comprehension:

In the following passage some words have been deleted. Read the passage carefully and select the most appropriate option to fill in each blank.  
Rabindranath Tagore founded a small school at Santiniketan in 1901 and Kala Bhavan, an art school, in 1919 which (1)\_\_\_\_\_ became a part of the Visvabharati University founded in 1921. Located in an (2)\_\_\_\_\_ village some distance from the city of Calcutta, Kala Bhavan presented an alternative methodology of art training, in which studio based practice was (3)\_\_\_\_\_ in favour of learning through observation and living as a part of nature. The natural surroundings with the (4)\_\_\_\_\_ of bare red earth dotted with trees, the colours of the changing seasons, the animals and birds (5)\_\_\_\_\_ inspiration to students.

SubQuestion No : 41

Q.41 Select the most appropriate option to fill in blank no. 1.

- Ans
- ☒ 1. better
  - ☒ 2. later
  - ☒ 3. faster
  - ☒ 4. slower

Question ID : 264330164177  
Option 1 ID : 264330643957  
Option 2 ID : 264330643955  
Option 3 ID : 264330643958  
Option 4 ID : 264330643956  
Status : Answered  
Chosen Option : 2

Comprehension:

In the following passage some words have been deleted. Read the passage carefully and select the most appropriate option to fill in each blank.  
Rabindranath Tagore founded a small school at Santiniketan in 1901 and Kala Bhavan, an art school, in 1919 which (1)\_\_\_\_\_ became a part of the Visvabharati University founded in 1921. Located in an (2)\_\_\_\_\_ village some distance from the city of Calcutta, Kala Bhavan presented an alternative methodology of art training, in which studio based practice was (3)\_\_\_\_\_ in favour of learning through observation and living as a part of nature. The natural surroundings with the (4)\_\_\_\_\_ of bare red earth dotted with trees, the colours of the changing seasons, the animals and birds (5)\_\_\_\_\_ inspiration to students.

SubQuestion No : 42

Q.42 Select the most appropriate option to fill in blank no. 2.

- Ans
- ☒ 1. normal
  - ☒ 2. magical
  - ☒ 3. reliable
  - ☒ 4. idyllic

Question ID : 264330164178  
Option 1 ID : 264330643959  
Option 2 ID : 264330643960  
Option 3 ID : 264330643962  
Option 4 ID : 264330643961  
Status : Answered  
Chosen Option : 4

**Comprehension:**

In the following passage some words have been deleted. Read the passage carefully and select the most appropriate option to fill in each blank.  
Rabindranath Tagore founded a small school at Santiniketan in 1901 and Kala Bhavan, an art school, in 1919 which (1)\_\_\_\_\_ became a part of the Visvabharati University founded in 1921. Located in an (2)\_\_\_\_\_ village some distance from the city of Calcutta, Kala Bhavan presented an alternative methodology of art training, in which studio based practice was (3)\_\_\_\_\_ in favour of learning through observation and living as a part of nature. The natural surroundings with the (4)\_\_\_\_\_ of bare red earth dotted with trees, the colours of the changing seasons, the animals and birds (5)\_\_\_\_\_ inspiration to students.

**SubQuestion No : 43**

**Q.43 Select the most appropriate option to fill in blank no. 3.**

- Ans ☒ 1. accepted  
☒ 2. rejected  
☒ 3. investigated  
☒ 4. aspired

Question ID : 264330164179  
Option 1 ID : 264330643963  
Option 2 ID : 264330643964  
Option 3 ID : 264330643965  
Option 4 ID : 264330643966  
Status : Answered  
Chosen Option : 4

**Comprehension:**

In the following passage some words have been deleted. Read the passage carefully and select the most appropriate option to fill in each blank.  
Rabindranath Tagore founded a small school at Santiniketan in 1901 and Kala Bhavan, an art school, in 1919 which (1)\_\_\_\_\_ became a part of the Visvabharati University founded in 1921. Located in an (2)\_\_\_\_\_ village some distance from the city of Calcutta, Kala Bhavan presented an alternative methodology of art training, in which studio based practice was (3)\_\_\_\_\_ in favour of learning through observation and living as a part of nature. The natural surroundings with the (4)\_\_\_\_\_ of bare red earth dotted with trees, the colours of the changing seasons, the animals and birds (5)\_\_\_\_\_ inspiration to students.

**SubQuestion No : 44**

**Q.44 Select the most appropriate option to fill in blank no. 4.**

- Ans ☒ 1. vistas  
☒ 2. murk  
☒ 3. haze  
☒ 4. band

Question ID : 264330164180  
Option 1 ID : 264330643970  
Option 2 ID : 264330643969  
Option 3 ID : 264330643968  
Option 4 ID : 264330643967  
Status : Answered  
Chosen Option : 1

Comprehension:

In the following passage some words have been deleted. Read the passage carefully and select the most appropriate option to fill in each blank.  
Rabindranath Tagore founded a small school at Santiniketan in 1901 and Kala Bhavan, an art school, in 1919 which (1)\_\_\_\_\_ became a part of the Visvabharati University founded in 1921. Located in an (2)\_\_\_\_\_ village some distance from the city of Calcutta, Kala Bhavan presented an alternative methodology of art training, in which studio based practice was (3)\_\_\_\_\_ in favour of learning through observation and living as a part of nature. The natural surroundings with the (4)\_\_\_\_\_ of bare red earth dotted with trees, the colours of the changing seasons, the animals and birds (5)\_\_\_\_\_ inspiration to students.

SubQuestion No : 45

Q.45 Select the most appropriate option to fill in blank no. 5.

- Ans
- ☒ 1. groomed
  - ☒ 2. refused
  - ☒ 3. provided
  - ☒ 4. agreed

Question ID : 264330164181  
Option 1 ID : 264330643972  
Option 2 ID : 264330643971  
Option 3 ID : 264330643973  
Option 4 ID : 264330643974  
Status : Answered  
Chosen Option : 3

Comprehension:

Read the given passage carefully and answer the questions that follow.  
Mountains occupy about a quarter of the Earth's land, harbour most of its biodiversity hotspots and supply fresh water to an estimated half of humanity. Present on every continent, mountains include a multitude of ecosystems holding many unique species such as snow leopards and mountain gorillas. They are also home to great cultural diversity among people adapted to the challenges of mountain life. Their special traditions and breath-taking scenery attract ever-growing numbers of tourists.  
Mountain regions are particularly sensitive to degradation from both human pressures and climate change. Steep slopes mean the clearing of forest for farming, settlements or infrastructure can cause serious soil erosion as well as the loss of habitat. Erosion and pollution harm the quality of water flowing downstream. Climate change threatens the quantity and timing of water supplies to farms, cities, industry and power stations. Fast-rising temperatures are forcing mountain species, ecosystems and the people that depend on them to adapt or migrate.

SubQuestion No : 46

Q.46 What is the ANTONYM for the word 'diversity' from the passage?

- Ans
- ☒ 1. Block
  - ☒ 2. Dilemma
  - ☒ 3. Uniformity
  - ☒ 4. Heritage

Question ID : 264330164691  
Option 1 ID : 264330645930  
Option 2 ID : 264330645929  
Option 3 ID : 264330645927  
Option 4 ID : 264330645928  
Status : Answered  
Chosen Option : 3



Comprehension:

Read the given passage carefully and answer the questions that follow.  
Mountains occupy about a quarter of the Earth's land, harbour most of its biodiversity hotspots and supply fresh water to an estimated half of humanity. Present on every continent, mountains include a multitude of ecosystems holding many unique species such as snow leopards and mountain gorillas. They are also home to great cultural diversity among people adapted to the challenges of mountain life. Their special traditions and breath-taking scenery attract ever-growing numbers of tourists.  
Mountain regions are particularly sensitive to degradation from both human pressures and climate change. Steep slopes mean the clearing of forest for farming, settlements or infrastructure can cause serious soil erosion as well as the loss of habitat. Erosion and pollution harm the quality of water flowing downstream. Climate change threatens the quantity and timing of water supplies to farms, cities, industry and power stations. Fast-rising temperatures are forcing mountain species, ecosystems and the people that depend on them to adapt or migrate.

SubQuestion No : 47

Q.47 What is the ANTONYM for the word 'migrate' from the passage?

- Ans ☒ 1. Stay  
☐ 2. Run  
☐ 3. Die  
☐ 4. Assume

Question ID : 264330164693  
Option 1 ID : 264330645935  
Option 2 ID : 264330645936  
Option 3 ID : 264330645937  
Option 4 ID : 264330645938  
Status : Answered  
Chosen Option : 1

Comprehension:

Read the given passage carefully and answer the questions that follow.  
Mountains occupy about a quarter of the Earth's land, harbour most of its biodiversity hotspots and supply fresh water to an estimated half of humanity. Present on every continent, mountains include a multitude of ecosystems holding many unique species such as snow leopards and mountain gorillas. They are also home to great cultural diversity among people adapted to the challenges of mountain life. Their special traditions and breath-taking scenery attract ever-growing numbers of tourists.  
Mountain regions are particularly sensitive to degradation from both human pressures and climate change. Steep slopes mean the clearing of forest for farming, settlements or infrastructure can cause serious soil erosion as well as the loss of habitat. Erosion and pollution harm the quality of water flowing downstream. Climate change threatens the quantity and timing of water supplies to farms, cities, industry and power stations. Fast-rising temperatures are forcing mountain species, ecosystems and the people that depend on them to adapt or migrate.

SubQuestion No : 48

Q.48 Which is the best description of the tone of the passage?

- Ans ☐ 1. Laudatory  
☐ 2. Emotional  
☐ 3. Biased  
☒ 4. Humanistic

Question ID : 264330164690  
Option 1 ID : 264330645923  
Option 2 ID : 264330645925  
Option 3 ID : 264330645924  
Option 4 ID : 264330645926  
Status : Answered  
Chosen Option : 4

Comprehension:

Read the given passage carefully and answer the questions that follow.  
Mountains occupy about a quarter of the Earth's land, harbour most of its biodiversity hotspots and supply fresh water to an estimated half of humanity. Present on every continent, mountains include a multitude of ecosystems holding many unique species such as snow leopards and mountain gorillas. They are also home to great cultural diversity among people adapted to the challenges of mountain life. Their special traditions and breath-taking scenery attract ever-growing numbers of tourists.  
Mountain regions are particularly sensitive to degradation from both human pressures and climate change. Steep slopes mean the clearing of forest for farming, settlements or infrastructure can cause serious soil erosion as well as the loss of habitat. Erosion and pollution harm the quality of water flowing downstream. Climate change threatens the quantity and timing of water supplies to farms, cities, industry and power stations. Fast-rising temperatures are forcing mountain species, ecosystems and the people that depend on them to adapt or migrate.

SubQuestion No : 49

Q.49 Which of the following represents the structure of the passage?

- Ans ☒ 1. Chronological  
☒ 2. Definition  
☒ 3. Compare and contrast  
☒ 4. Cause-effect

Question ID : 264330164692  
Option 1 ID : 264330645934  
Option 2 ID : 264330645932  
Option 3 ID : 264330645933  
Option 4 ID : 264330645931  
Status : Answered  
Chosen Option : 4

Comprehension:

Read the given passage carefully and answer the questions that follow.  
Mountains occupy about a quarter of the Earth's land, harbour most of its biodiversity hotspots and supply fresh water to an estimated half of humanity. Present on every continent, mountains include a multitude of ecosystems holding many unique species such as snow leopards and mountain gorillas. They are also home to great cultural diversity among people adapted to the challenges of mountain life. Their special traditions and breath-taking scenery attract ever-growing numbers of tourists.  
Mountain regions are particularly sensitive to degradation from both human pressures and climate change. Steep slopes mean the clearing of forest for farming, settlements or infrastructure can cause serious soil erosion as well as the loss of habitat. Erosion and pollution harm the quality of water flowing downstream. Climate change threatens the quantity and timing of water supplies to farms, cities, industry and power stations. Fast-rising temperatures are forcing mountain species, ecosystems and the people that depend on them to adapt or migrate.

SubQuestion No : 50

Q.50 Which of the following most accurately states the central idea of the passage?

- Ans ☒ 1. Pollution  
☒ 2. Mountain ecosystem  
☒ 3. Biodegradation  
☒ 4. Climate change

Question ID : 264330164689  
Option 1 ID : 264330645919  
Option 2 ID : 264330645922  
Option 3 ID : 264330645921  
Option 4 ID : 264330645920  
Status : Answered  
Chosen Option : 3