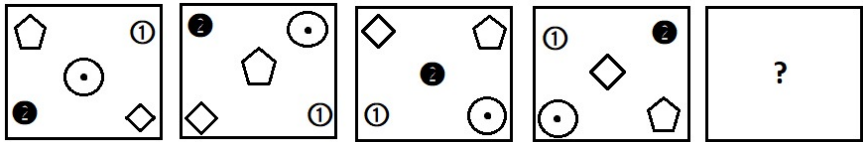


**Sub Inspector in Delhi Police and Central Armed Police Forces Examination 2024 Paper I  
Exam**

Roll Number	
Candidate Name	
Venue Name	
Exam Date	27/06/2024
Exam Time	4:00 PM - 6:00 PM
Subject	SICPO Paper I 2024

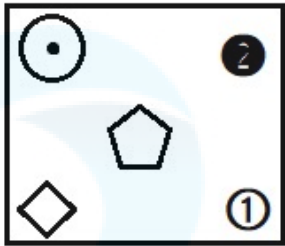
Section : **General Intelligence and Reasoning**

Q.1 Select the figure from among the given options that can logically replace the question mark (?) in the following series.

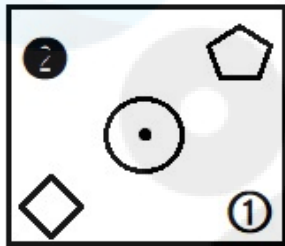


Ans

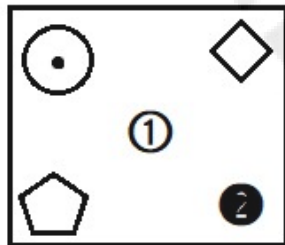
✗ 1.



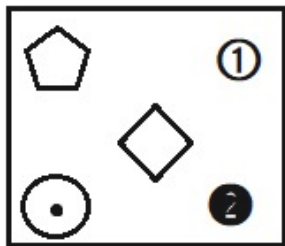
✗ 2.



✓ 3.



✗ 4.



Question ID : 630680867759

Option 1 ID : 6306803398681

Option 2 ID : 6306803398680

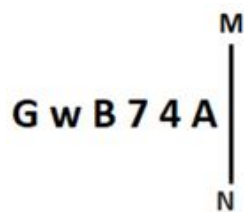
Option 3 ID : 6306803398683

Option 4 ID : 6306803398682

Status : Answered

Chosen Option : 3

Q.2 Select the correct mirror image of the given figure when the mirror is placed at MN as shown below.



- Ans
- ☒ 1. G w B 7 4 A
  - ☒ 2. A 4 7 B w G
  - ☒ 3. A 4 7 B w G
  - ☒ 4. A 4 7 B w G

Question ID : 630680356641  
Option 1 ID : 6306801388565  
Option 2 ID : 6306801388566  
Option 3 ID : 6306801388567  
Option 4 ID : 6306801388568  
Status : Answered  
Chosen Option : 4

Q.3 Select the set in which the numbers are related in the same way as are the numbers of the following sets.

(NOTE: Operations should be performed on the whole numbers, without breaking down the numbers into its constituent digits. E.g. 13 – Operations on 13 such as adding /deleting /multiplying etc. to 13 can be performed. Breaking down 13 into 1 and 3 and then performing mathematical operations on 1 and 3 is not allowed)

(288, 144, 24)  
(432, 216, 36)

- Ans
- ☒ 1. (504, 252, 42)
  - ☒ 2. (506, 252, 42)
  - ☒ 3. (504, 252, 44)
  - ☒ 4. (504, 250, 42)

Question ID : 630680344674  
Option 1 ID : 6306801341008  
Option 2 ID : 6306801341007  
Option 3 ID : 6306801341005  
Option 4 ID : 6306801341006  
Status : Answered  
Chosen Option : 2

Q.4 Based on the English alphabetical order, three of the following four letter-clusters are alike in a certain way and thus form a group. Which letter-cluster does not belong to that group?  
(Note: The odd letter-cluster is not based on the number of consonants/vowels or their position in the letter-cluster.)

- Ans ☒ 1. FIK  
☒ 2. JMP  
☒ 3. ORT  
☒ 4. DGI

Question ID : 630680416089  
Option 1 ID : 6306801623120  
Option 2 ID : 6306801623121  
Option 3 ID : 6306801623122  
Option 4 ID : 6306801623119  
Status : Answered  
Chosen Option : 2

Q.5 In a code language, 'BASIC' is coded as 101 and 'MAGIC' is coded as 102. How will 'LIGHT' be coded in the same language?

- Ans ☒ 1. 85  
☒ 2. 79  
☒ 3. 82  
☒ 4. 86

Question ID : 630680416660  
Option 1 ID : 6306801625405  
Option 2 ID : 6306801625403  
Option 3 ID : 6306801625404  
Option 4 ID : 6306801625406  
Status : Not Answered  
Chosen Option : --

Q.6 Select the set in which the numbers are related in the same way as are the numbers of the given sets.  
(NOTE: Operations should be performed on the whole numbers, without breaking down the numbers into its constituent digits. E.g. 13 – Operations on 13 such as adding/deleting/multiplying, etc. to 13 can be performed. Breaking down 13 into 1 and 3 and then performing mathematical operations on 1 and 3 is not allowed.)  
(16, 4, 20)  
(28, 7, 35)

- Ans ☒ 1. (52, 13, 65)  
☒ 2. (52, 13, 60)  
☒ 3. (50, 13, 65)  
☒ 4. (50, 13, 60)

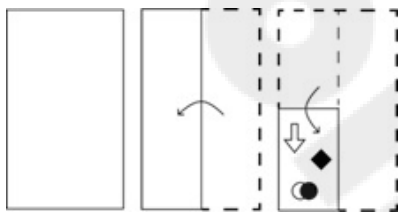
Question ID : 630680294012  
Option 1 ID : 6306801143863  
Option 2 ID : 6306801143861  
Option 3 ID : 6306801143862  
Option 4 ID : 6306801143860  
Status : Answered  
Chosen Option : 1

Q.7 What will come in place of the question mark (?) when + and - are interchanged and 8 and 6 are also interchanged?  
 $8 - 6 + 10 = ?$

- Ans ☒ 1. 7  
☒ 2. 4  
☒ 3. 6  
☒ 4. 5

Question ID : 630680411791  
Option 1 ID : 6306801606002  
Option 2 ID : 6306801606001  
Option 3 ID : 6306801606000  
Option 4 ID : 6306801605999  
Status : Answered  
Chosen Option : 2

Q.8 The sequence of folding a paper and the manner in which the folded paper is cut is shown in the following figures. How would this paper look when unfolded?



- Ans ☒ 1.
- ☒ 2.
- ☒ 3.
- ☒ 4.

Question ID : 630680344222  
Option 1 ID : 6306801339203  
Option 2 ID : 6306801339204  
Option 3 ID : 6306801339202  
Option 4 ID : 6306801339201  
Status : Answered  
Chosen Option : 1

Q.9 Select the option that is related to the fifth letter-cluster in the same way as the second letter-cluster is related to the first letter-cluster and the fourth letter-cluster is related to the third letter-cluster.  
ISLAND : ANDISL :: EITHER : HEREIT :: IMPACT : ?

- Ans ☒ 1. ICAPMT  
☒ 2. TCAPMI  
☒ 3. IPMCTA  
☒ 4. ACTIMP

Question ID : 630680416503  
Option 1 ID : 6306801624777  
Option 2 ID : 6306801624776  
Option 3 ID : 6306801624778  
Option 4 ID : 6306801624775  
Status : Answered  
Chosen Option : 4

Q.10 If 'P' stands for '+', 'Q' stands for 'x', 'R' stands for '+' and 'S' stands for '-', what will come in place of the question mark (?) in the following equation?

$[(18 \text{ S } 5) \text{ Q } 4] \text{ P } 2 \text{ R } 22 \text{ Q } 3 \text{ S } 24 \text{ R } 9 = ?$

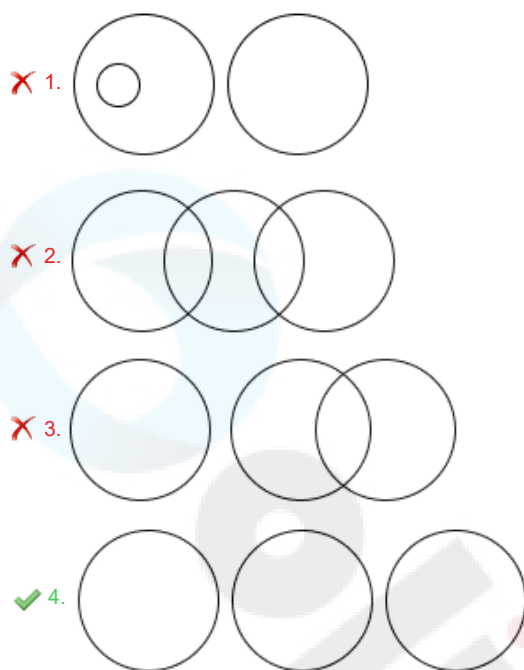
- Ans ☒ 1. 89  
☒ 2. 77  
☒ 3. 82  
☒ 4. 63

Question ID : 630680411677  
Option 1 ID : 6306801605546  
Option 2 ID : 6306801605544  
Option 3 ID : 6306801605545  
Option 4 ID : 6306801605543  
Status : Answered  
Chosen Option : 2

Q.11 Select the Venn diagram that best illustrates the relationship between the following classes.

Mechanic, Peon, Lawyer

Ans



Question ID : 630680869737

Option 1 ID : 6306803406316

Option 2 ID : 6306803406315

Option 3 ID : 6306803406314

Option 4 ID : 6306803406317

Status : Answered

Chosen Option : 4

Q.12 What will come in the place of '?' in the following equation, if '+' and '-' are interchanged and also 'x' and '÷' are interchanged?  
 $154 \times 11 - 24 \div 3 + 19 = ?$

Ans ✗ 1. 62

✓ 2. 67

✗ 3. 71

✗ 4. 54

Question ID : 630680343180

Option 1 ID : 6306801335096

Option 2 ID : 6306801335093

Option 3 ID : 6306801335095

Option 4 ID : 6306801335094

Status : Answered

Chosen Option : 2

Q.13 Select the figure from among the given options that can logically replace the question mark (?) in the following series.

$\begin{matrix} H \\ \geq \\ i \end{matrix}$	$\begin{matrix} \leftrightarrow \\ H \\ \geq \\ i \end{matrix}$	$\begin{matrix} \leftrightarrow \\ = \\ H \\ \geq \end{matrix}$	$\begin{matrix} \geq \\ \leftrightarrow \\ H \\ = \end{matrix}$	$\begin{matrix} ? \end{matrix}$
--	---	---	---	---------------------------------

Ans

✗ 1.

$\begin{matrix} = \\ \geq \\ H \\ \leftrightarrow \end{matrix}$
---

✗ 2.

$\begin{matrix} \leftrightarrow \\ = \\ i \\ H \end{matrix}$
--

✗ 3.

$\begin{matrix} H \\ \geq \\ i \\ = \end{matrix}$
---

✓ 4.

$\begin{matrix} \geq \\ \leftrightarrow \\ i \\ = \end{matrix}$
---

Question ID : 630680867761

Option 1 ID : 6306803398688

Option 2 ID : 6306803398689

Option 3 ID : 6306803398690

Option 4 ID : 6306803398691

Status : Not Answered

Chosen Option : --



Q.14 Which letter cluster will replace the question mark (?) to complete the given series?  
TDQR, SFNV, ?, QJHD, PLEH

- Ans    ☒ 1. RHKZ  
         ☒ 2. RGJZ  
         ☒ 3. FJCQ  
         ☒ 4. IDBZ

Question ID : 630680417191  
Option 1 ID : 6306801627530  
Option 2 ID : 6306801627528  
Option 3 ID : 6306801627529  
Option 4 ID : 6306801627527  
Status : Answered  
Chosen Option : 1

Q.15 Which of the following numbers will replace the question mark (?) in the given series?  
324, 722, 1200, ?, 2420

- Ans    ☒ 1. 1764  
         ☒ 2. 1632  
         ☒ 3. 1634  
         ☒ 4. 1736

Question ID : 630680412019  
Option 1 ID : 6306801606914  
Option 2 ID : 6306801606912  
Option 3 ID : 6306801606913  
Option 4 ID : 6306801606911  
Status : Not Answered  
Chosen Option : --

Q.16 Two statements are given, followed by two conclusions numbered I and II. Assuming the statements to be true, even if they seem to be at variance with commonly known facts, decide which of the conclusions logically follow(s) from the statements.

Statements:  
All wings are whites.  
No whites are wands.

Conclusions:  
I. Some wings are wands.  
II. No wand is a white.

- Ans    ☒ 1. Only conclusion II follows  
         ☒ 2. Both conclusions I and II follow  
         ☒ 3. Neither conclusion I nor II follows  
         ☒ 4. Only conclusion I follows

Question ID : 630680417101  
Option 1 ID : 6306801627168  
Option 2 ID : 6306801627169  
Option 3 ID : 6306801627170  
Option 4 ID : 6306801627167  
Status : Answered  
Chosen Option : 1

Q.17 If 'P' stands for '+', 'Q' stands for 'x', 'R' stands for '+' and 'S' stands for '-', what will come in place of the question mark (?) in the following equation?

45 R (26 Q 2) P 4 R 19 S 32 = ?

- Ans
- ☒ 1. 50
  - ☒ 2. 35
  - ☒ 3. 45
  - ☒ 4. 40

Question ID : 630680411680  
Option 1 ID : 6306801605558  
Option 2 ID : 6306801605555  
Option 3 ID : 6306801605557  
Option 4 ID : 6306801605556  
Status : Answered  
Chosen Option : 3

Q.18 Select the set in which the numbers are related in the same way as are the numbers of the following sets.

(NOTE: Operations should be performed on the whole numbers, without breaking down the numbers into its constituent digits. E.g. 13 – Operations on 13 such as adding /deleting /multiplying etc. to 13 can be performed. Breaking down 13 into 1 and 3 and then performing mathematical operations on 1 and 3 is not allowed)

(21, 3 , 15)  
(49, 7, 35)

- Ans
- ☒ 1. (84, 12, 60)
  - ☒ 2. (85, 12, 60)
  - ☒ 3. (84, 12, 62)
  - ☒ 4. (85, 13, 60)

Question ID : 630680344668  
Option 1 ID : 6306801340983  
Option 2 ID : 6306801340984  
Option 3 ID : 6306801340981  
Option 4 ID : 6306801340982  
Status : Answered  
Chosen Option : 1

Q.19 Select the Venn diagram that best illustrates the relationship between the following classes.  
Humans, Painters, Men

Ans

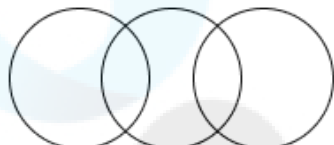
✗ 1.



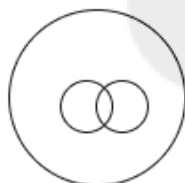
✗ 2.



✗ 3.



✓ 4.



Question ID : 630680869733  
Option 1 ID : 6306803406300  
Option 2 ID : 6306803406301  
Option 3 ID : 6306803406298  
Option 4 ID : 6306803406299

Status : Answered

Chosen Option : 4

Q.20 In a certain code language,  
'A + B' means 'A is the mother of B'  
'A - B' means 'A is the husband of B'  
'A x B' means 'B is the sister of A'  
'A ÷ B' means 'A is the father of B'  
Based on the above, how is B related to E if 'D ÷ E - C + A x B'?

Ans

✗ 1. Wife

✗ 2. Son

✗ 3. Mother

✓ 4. Daughter

Question ID : 630680296563  
Option 1 ID : 6306801153905  
Option 2 ID : 6306801153903  
Option 3 ID : 6306801153906  
Option 4 ID : 6306801153904

Status : Answered

Chosen Option : 4

Q.21 Which of the following terms will replace the question mark (?) in the given series?  
CJS, DKT, ELU, ?

- Ans
- ☒ 1. DLO
  - ☒ 2. DHB
  - ☒ 3. DRT
  - ☒ 4. FMV

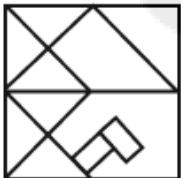
Question ID : 630680417065  
Option 1 ID : 6306801627026  
Option 2 ID : 6306801627025  
Option 3 ID : 6306801627023  
Option 4 ID : 6306801627024  
Status : Answered  
Chosen Option : 4

Q.22 Select the option figure in which the given figure is embedded as its part (rotation is NOT allowed).

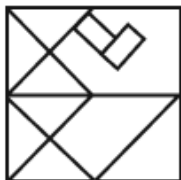


Ans

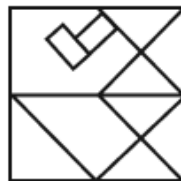
☒ 1.



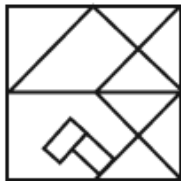
☒ 2.



☒ 3.



☒ 4.



Question ID : 630680867780  
Option 1 ID : 6306803398764  
Option 2 ID : 6306803398767  
Option 3 ID : 6306803398765  
Option 4 ID : 6306803398766  
Status : Answered  
Chosen Option : 3

Q.23 Which of the following numbers will replace the question mark (?) in the given series?  
29, 30, 26, 35, 19, ?

- Ans
- ☒ 1. 41
  - ☒ 2. 42
  - ☒ 3. 44
  - ☒ 4. 43

Question ID : 630680411771  
Option 1 ID : 6306801605919  
Option 2 ID : 6306801605920  
Option 3 ID : 6306801605922  
Option 4 ID : 6306801605921  
Status : Answered  
Chosen Option : 3

Q.24 Which of the following numbers will replace the question mark (?) in the given series?  
12, 13, 30, 99, 412, ?

- Ans
- ☒ 1. 2065
  - ☒ 2. 2075
  - ☒ 3. 2085
  - ☒ 4. 2055

Question ID : 630680411773  
Option 1 ID : 6306801605928  
Option 2 ID : 6306801605929  
Option 3 ID : 6306801605930  
Option 4 ID : 6306801605927  
Status : Answered  
Chosen Option : 3

Q.25 Select the set in which the numbers are related in the same way as are the numbers of the following sets.

(NOTE: Operations should be performed on the whole numbers, without breaking down the numbers into its constituent digits. E.g. 13 – Operations on 13 such as adding /deleting /multiplying etc. to 13 can be performed. Breaking down 13 into 1 and 3 and then performing mathematical operations on 1 and 3 is not allowed)

(14, 28 , 84)  
(17, 34, 102)

- Ans
- ☒ 1. (21, 42, 126)
  - ☒ 2. (20, 41, 126)
  - ☒ 3. (20, 41, 136)
  - ☒ 4. (21, 42, 136)

Question ID : 630680344666  
Option 1 ID : 6306801340974  
Option 2 ID : 6306801340976  
Option 3 ID : 6306801340973  
Option 4 ID : 6306801340975  
Status : Answered  
Chosen Option : 1

Q.26 In a certain code language, 'FOX' is coded as '14' and 'GOAT' is coded as '21'. How will 'TOMMY' be coded in that language?

- Ans ☒ 1. 45  
☒ 2. 35  
☒ 3. 30  
☒ 4. 25

Question ID : 630680312596  
Option 1 ID : 6306801216268  
Option 2 ID : 6306801216266  
Option 3 ID : 6306801216267  
Option 4 ID : 6306801216265  
Status : Not Answered  
Chosen Option : --

Q.27 Select the number from among the given options that can replace the question mark (?) in the following series.  
115, 140, 160, 175, 185, ?

- Ans ☒ 1. 193  
☒ 2. 195  
☒ 3. 192  
☒ 4. 190

Question ID : 630680411930  
Option 1 ID : 6306801606558  
Option 2 ID : 6306801606555  
Option 3 ID : 6306801606556  
Option 4 ID : 6306801606557  
Status : Answered  
Chosen Option : 4

Q.28 If 'P' stands for '+', 'Q' stands for 'x', 'R' stands for '+' and 'S' stands for '-', what will come in place of the question mark '?' in the following equation?

(121 S 46) R 19 Q 5 R 126 P 6 S 38 = ?

- Ans ☒ 1. 139  
☒ 2. 144  
☒ 3. 153  
☒ 4. 159

Question ID : 630680411674  
Option 1 ID : 6306801605534  
Option 2 ID : 6306801605533  
Option 3 ID : 6306801605531  
Option 4 ID : 6306801605532  
Status : Answered  
Chosen Option : 3

Q.29 In a certain code language, 'MAP' is written as '102' and 'ROT' is written as '56'. How will 'SEC' be written in that language?

Ans ☒ 1. 108

☒ 2. 112

☒ 3. 98

☒ 4. 84

Question ID : 630680416590

Option 1 ID : 6306801625124

Option 2 ID : 6306801625125

Option 3 ID : 6306801625126

Option 4 ID : 6306801625123

Status : Not Answered

Chosen Option : --

Q.30 In a code language, 'ROAD' is written as 'QKZZ', and 'BAND' is written as 'AWMZ'. How will 'TASK' be written in that language?

Ans ☒ 1. SWRG

☒ 2. RSWG

☒ 3. SRGW

☒ 4. GRSW

Question ID : 630680416686

Option 1 ID : 6306801625509

Option 2 ID : 6306801625510

Option 3 ID : 6306801625507

Option 4 ID : 6306801625508

Status : Not Answered

Chosen Option : --

Q.31 Select the option that is related to the fifth letter-cluster in the same way as the second letter-cluster is related to the first letter-cluster and the fourth letter-cluster is related to the third letter-cluster.

JOCK : GLZH :: HURT : EROQ :: SPIN : ?

Ans ☒ 1. QNFK

☒ 2. PNEL

☒ 3. PMFK

☒ 4. QMEK

Question ID : 630680416491

Option 1 ID : 6306801624729

Option 2 ID : 6306801624728

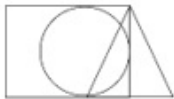
Option 3 ID : 6306801624730

Option 4 ID : 6306801624727

Status : Answered

Chosen Option : 3

Q.32 Select the option in which the given figure (X) is embedded as its part. (Rotation is NOT allowed.)



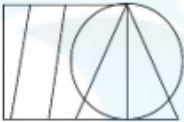
X

Ans

✗ 1.



✗ 2.



✗ 3.



✓ 4.



Question ID : 630680305493

Option 1 ID : 6306801188350

Option 2 ID : 6306801188352

Option 3 ID : 6306801188351

Option 4 ID : 6306801188349

Status : Answered

Chosen Option : 2

Q.33 In a code language, 'POET' is coded as '14-13-3-18' and 'SOON' is coded as '17-13-13-12'. How will 'WRITE' be coded in the same language?

Ans ✗ 1. 19-16-5-18-3

✓ 2. 21-16-7-18-3

✗ 3. 21-16-7-9-3

✗ 4. 19-16-7-18-5

Question ID : 630680302862

Option 1 ID : 6306801178113

Option 2 ID : 6306801178110

Option 3 ID : 6306801178111

Option 4 ID : 6306801178112

Status : Answered

Chosen Option : 2



Q.34 P, Q, R, S, T and U are sitting around a circular table facing the centre. Only one person sits between T and R. Only one person sits between R and U. Only two people sit between U and Q. S sits to the immediate left of T. Who sits second to the left of P?

- Ans ☒ 1. S  
☒ 2. Q  
☒ 3. R  
☒ 4. U

Question ID : 630680416853  
Option 1 ID : 6306801626176  
Option 2 ID : 6306801626178  
Option 3 ID : 6306801626175  
Option 4 ID : 6306801626177  
Status : Answered  
Chosen Option : 2

Q.35 Which letter-cluster will complete the given series?  
FPW, FFPPWW, FFFPPPPWWW, \_\_\_\_\_

- Ans ☒ 1. FFFFFFFPPPPPPWWWWW  
☒ 2. FFFFFFFFPPPPPPWWWW  
☒ 3. FFFFFFFFPPPPPPPPWWWWW  
☒ 4. FFFFPPPPPPWWWW

Question ID : 630680416700  
Option 1 ID : 6306801625565  
Option 2 ID : 6306801625564  
Option 3 ID : 6306801625566  
Option 4 ID : 6306801625563  
Status : Answered  
Chosen Option : 2

Q.36 If 'A' stands for '+', 'B' stands for '×', 'C' stands for '+' and 'D' stands for '−', what will come in place of the question mark (?) in the following equation?  
905 B 2 C 47 D 903 A 3 = ?

- Ans ☒ 1. 1556  
☒ 2. 1155  
☒ 3. 1165  
☒ 4. 1655

Question ID : 630680411708  
Option 1 ID : 6306801605667  
Option 2 ID : 6306801605669  
Option 3 ID : 6306801605670  
Option 4 ID : 6306801605668  
Status : Answered  
Chosen Option : 1

**Q.37** In the given number-pairs, the second number is obtained by applying certain mathematical operations to the first number. Select the number-pair in which the numbers are related in the same way as are the numbers of the given number-pairs. (NOTE: Operations should be performed on the whole numbers, without breaking down the numbers into its constituent digits. E.g., 13 – Operations on 13 such as adding/subtracting/multiplying etc. to 13 can be performed. Breaking down 13 into 1 and 3 and then performing mathematical operations on 1 and 3 is not allowed.)  
(45, 88)  
(26, 50)

Ans ☒ 1. (15, 32)

☒ 2. (21, 41)

☒ 3. (22, 42)

☒ 4. (18, 36)

Question ID : 630680337273

Option 1 ID : 6306801311815

Option 2 ID : 6306801311816

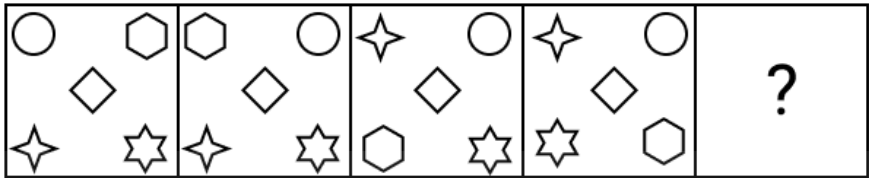
Option 3 ID : 6306801311814

Option 4 ID : 6306801311813

Status : Answered

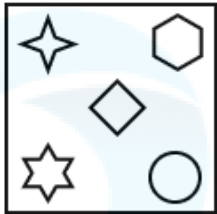
Chosen Option : 3

Q.38 Identify the option figure that when put in place of the question mark (?) will logically complete the series.

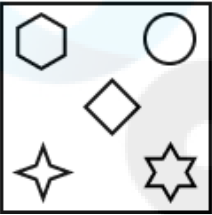


Ans

✓ 1.



✗ 2.



✗ 3.



✗ 4.



Question ID : 630680867766

Option 1 ID : 6306803398710

Option 2 ID : 6306803398711

Option 3 ID : 6306803398709

Option 4 ID : 6306803398708

Status : Not Answered

Chosen Option : --

Q.39 Aditi departs from her home and walks 38 m towards West and then turns right and walks 19 m. Now she turns right and walks 25 m. She then takes a left turn and walks 21 m. She then takes a left turn again and walks 38 m. She takes a final left turn and walks 25 m to stop at point X. How far is she from a pole which is 15 m North of her house? (Assume that all turns are 90 degree turns only.)

Ans ✗ 1. 38 m

✗ 2. 49 m

✗ 3. 57 m

✓ 4. 51 m

Question ID : 630680416276

Option 1 ID : 6306801623867

Option 2 ID : 6306801623869

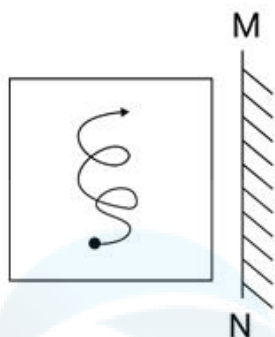
Option 3 ID : 6306801623870

Option 4 ID : 6306801623868

Status : Answered

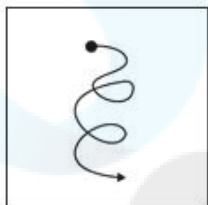
Chosen Option : 1

Q.40 Select the correct mirror image of the given figure when the mirror is placed at MN as shown below.

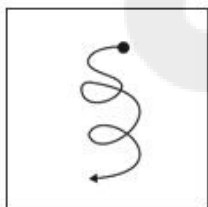


Ans

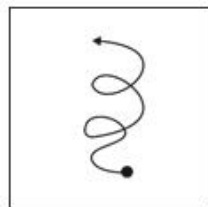
✗ 1.



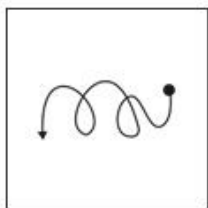
✗ 2.



✓ 3.



✗ 4.



Question ID : 630680296905

Option 1 ID : 6306801155263

Option 2 ID : 6306801155264

Option 3 ID : 6306801155265

Option 4 ID : 6306801155266

Status : Answered

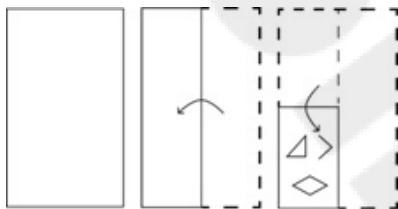
Chosen Option : 3

Q.41 Ajay starts from Point A and drives 20 km towards South. He then takes a left turn, drives 5 km, turns left and drives 30 km. He then takes a right turn and drives 8 km. He takes a final right turn, drives 10 km and stops at Point Q. How far (shortest distance) and towards which direction should he now drive to reach Point A again? (All turns are 90° turns only.)

- Ans
- ☒ 1. 13 km towards East
  - ☒ 2. 5 km towards West
  - ☒ 3. 13 km towards West
  - ☒ 4. 8 km towards West

Question ID : 630680416082  
Option 1 ID : 6306801623094  
Option 2 ID : 6306801623091  
Option 3 ID : 6306801623093  
Option 4 ID : 6306801623092  
Status : Answered  
Chosen Option : 3

Q.42 The sequence of folding a paper and the manner in which the folded paper is cut is shown in the following figures. How would this paper look when unfolded?



Ans

- ☒ 1.
- ☒ 2.
- ☒ 3.
- ☒ 4.

Question ID : 630680344226  
Option 1 ID : 6306801339220  
Option 2 ID : 6306801339217  
Option 3 ID : 6306801339219  
Option 4 ID : 6306801339218  
Status : Answered  
Chosen Option : 3

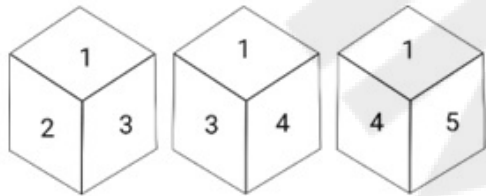
Q.43 Select the option that represents the correct order of the given words as they would appear in an English dictionary.

- 1. Temperament
- 2. Tenure
- 3. Tenant
- 4. Tender
- 5. Temptation
- 6. Temperature

Ans ☒ 1. 1, 6, 5, 2, 4, 3  
☒ 2. 1, 6, 5, 3, 2, 4  
☒ 3. 1, 6, 5, 3, 4, 2  
☒ 4. 1, 6, 5, 2, 3, 4

Question ID : 630680417391  
Option 1 ID : 6306801628329  
Option 2 ID : 6306801628328  
Option 3 ID : 6306801628327  
Option 4 ID : 6306801628330  
Status : Answered  
Chosen Option : 3

Q.44 Three different positions of the same dice are shown. Find the number on the face opposite the face showing '2'.



Ans ☒ 1. 6  
☒ 2. 1  
☒ 3. 5  
☒ 4. 4

Question ID : 630680321647  
Option 1 ID : 6306801251285  
Option 2 ID : 6306801251286  
Option 3 ID : 6306801251288  
Option 4 ID : 6306801251287  
Status : Answered  
Chosen Option : 4

Q.45 Select the option that represents the correct order of the given words as they would appear in an English dictionary.

1. Dermatology
2. Derogation
3. Derivative
4. Derailed
5. Dermestid
6. Deregulation

Ans ☒ 1. 4, 3, 2, 1, 5, 6  
☒ 2. 4, 6, 3, 2, 1, 5  
☒ 3. 4, 6, 3, 1, 5, 2  
☒ 4. 4, 6, 1, 5, 3, 2

Question ID : 630680417409

Option 1 ID : 6306801628402

Option 2 ID : 6306801628399

Option 3 ID : 6306801628400

Option 4 ID : 6306801628401

Status : Answered

Chosen Option : 3

Q.46 Which of the following interchanges of signs would make the given equation correct?  
 $56 \div 8 - 14 \times 2 + 12 = 23$

Ans ☒ 1. + and ×  
☒ 2. - and ×  
☒ 3. + and ×  
☒ 4. - and +

Question ID : 630680411963

Option 1 ID : 6306801606690

Option 2 ID : 6306801606689

Option 3 ID : 6306801606687

Option 4 ID : 6306801606688

Status : Answered

Chosen Option : 4

Q.47 A, B, C, D, E and F are six members of a family. There are parents, their children and grandchildren in the family. A is the son of C and E is the daughter of A. D is the daughter of F who is the mother of E. Which of the following pairs is the grandchildren of the parents?

Ans ☒ 1. C, E  
☒ 2. D, E  
☒ 3. A, E  
☒ 4. A, D

Question ID : 630680102737

Option 1 ID : 630680399209

Option 2 ID : 630680399210

Option 3 ID : 630680399207

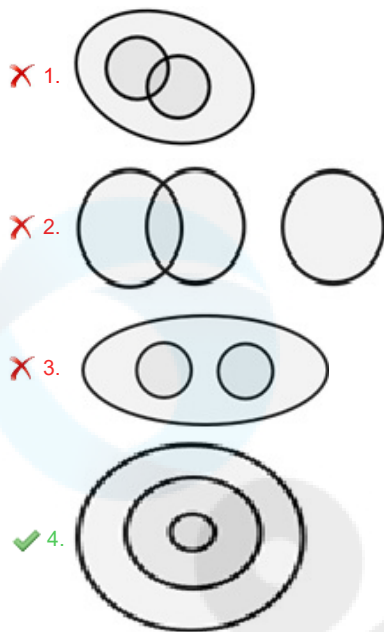
Option 4 ID : 630680399208

Status : Answered

Chosen Option : 2

Q.48 Select the Venn diagram that best illustrates the relationship between the following classes.  
India, Tamil Nadu, Chennai

Ans



Question ID : 630680417337

Option 1 ID : 6306801628113

Option 2 ID : 6306801628114

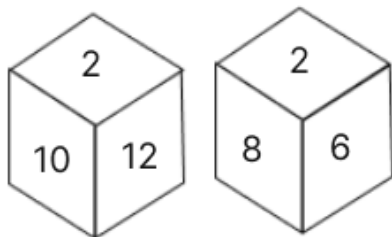
Option 3 ID : 6306801628112

Option 4 ID : 6306801628111

Status : Answered

Chosen Option : 4

Q.49 A dice has its faces marked by numbers 2, 4, 6, 8, 10 and 12. Two positions of the same dice are given below. Which face is opposite to face 4?



Ans ✗ 1. 10  
✗ 2. 6  
✗ 3. 12  
✓ 4. 2

Question ID : 630680867790

Option 1 ID : 6306803398804

Option 2 ID : 6306803398807

Option 3 ID : 6306803398805

Option 4 ID : 6306803398806

Status : Answered

Chosen Option : 4



**Q.50** In a code language, 'PIG' is coded as 29 and 'COW' is coded as 38. How will 'CAMEL' be coded in the same language?

- Ans
- ☒ 1. 27
  - ☒ 2. 29
  - ☒ 3. 22
  - ☒ 4. 34

Question ID : 630680416662  
Option 1 ID : 6306801625412  
Option 2 ID : 6306801625413  
Option 3 ID : 6306801625411  
Option 4 ID : 6306801625414  
Status : Not Answered  
Chosen Option : --

Section : General Knowledge and General Awareness

**Q.1** In 1596, who suggested in his work 'Thesaurus Geographicus' that the continents of the earth were not always located in their present positions?

- Ans
- ☒ 1. Dan Peter McKenzie
  - ☒ 2. Georges Cuvier
  - ☒ 3. Louis Agassiz
  - ☒ 4. Abraham Ortelius

Question ID : 630680407451  
Option 1 ID : 6306801588745  
Option 2 ID : 6306801588743  
Option 3 ID : 6306801588742  
Option 4 ID : 6306801588744  
Status : Not Answered  
Chosen Option : --

**Q.2** Gobinda Chandra Pal is an awardee of the Sangeet Natak Akademi Amrit Award for the year 2022. He contributed to the field of:

- Ans
- ☒ 1. Odissi Dance (Gotipua)
  - ☒ 2. Dance (Kathak)
  - ☒ 3. Puppetry
  - ☒ 4. Theatre (Acting)

Question ID : 630680409355  
Option 1 ID : 6306801596250  
Option 2 ID : 6306801596249  
Option 3 ID : 6306801596252  
Option 4 ID : 6306801596251  
Status : Not Answered  
Chosen Option : --

Q.3

In how many categories are loans provided under the MUDRA loan scheme?

Ans

✖

1. 4

✔

2. 3

✖

3. 1

✖

4. 2

Question ID : 630680407150

Option 1 ID : 6306801587545

Option 2 ID : 6306801587544

Option 3 ID : 6306801587542

Option 4 ID : 6306801587543

Status : Not Answered

Chosen Option : --

Q.4

Which of the following is a selective credit instrument?

Ans

✖

1. Variable reserve ratio

✖

2. Bank rate

✖

3. CRR

✔

4. Credit rationing

Question ID : 630680407196

Option 1 ID : 6306801587726

Option 2 ID : 6306801587728

Option 3 ID : 6306801587729

Option 4 ID : 6306801587727

Status : Not Answered

Chosen Option : --

Q.5

Which of the following forces can only be applied when in contact with an object?

Ans

✔

1. Frictional force

✖

2. Gravitational force

✖

3. Electrostatic force

✖

4. Magnetic force

Question ID : 63068052306

Option 1 ID : 630680201327

Option 2 ID : 630680201329

Option 3 ID : 630680201326

Option 4 ID : 630680201328

Status : Answered

Chosen Option : 1

Q.6

In which year were four new Directive Principles added to the original list?

Ans

✔

1. 1976

✖

2. 1980

✖

3. 1977

✖

4. 1975

Question ID : 630680305536

Option 1 ID : 6306801188518

Option 2 ID : 6306801188520

Option 3 ID : 6306801188519

Option 4 ID : 6306801188517

Status : Answered

Chosen Option : 4

Q.7 With progressive delicensing of industries as part of liberalisation, which of the following is the industry that is removed from the requirement of license?

- Ans ☒ 1. Cigars and cigarettes of tobacco, and manufactured tobacco substitutes
- ☒ 2. Coal and lignite
- ☒ 3. Industrial explosives
- ☒ 4. Hazardous chemicals

Question ID : 630680407169  
Option 1 ID : 6306801587618  
Option 2 ID : 6306801587621  
Option 3 ID : 6306801587620  
Option 4 ID : 6306801587619  
Status : Not Answered  
Chosen Option : --

Q.8 Who among the following is a distinguished and experienced scion of the famous Kavungal family associated with 'Kathakali' for six generations?

- Ans ☒ 1. Meenakshi Sundaram Pillai
- ☒ 2. Ammannur Madhava Chakyar
- ☒ 3. Chathunni Panicker
- ☒ 4. Padma Subramanyam

Question ID : 630680306007  
Option 1 ID : 6306801190381  
Option 2 ID : 6306801190382  
Option 3 ID : 6306801190384  
Option 4 ID : 6306801190383  
Status : Not Answered  
Chosen Option : --

Q.9 Kamalini Asthana and Nalini Asthana, veteran dancers who represent Benaras Gharana of Kathak, were conferred with which of the following awards in the year 2022?

- Ans ☒ 1. Sangeet Natak Akademi
- ☒ 2. Padma Bhushan
- ☒ 3. Padma Vibhushan
- ☒ 4. Padma Shri

Question ID : 630680309161  
Option 1 ID : 6306801202821  
Option 2 ID : 6306801202822  
Option 3 ID : 6306801202823  
Option 4 ID : 6306801202824  
Status : Not Answered  
Chosen Option : --

Q.10 Which country won the 15th Men's Hockey World Cup-2023 title?

- Ans ☒ 1. Belgium  
☒ 2. India  
☒ 3. Germany  
☒ 4. Pakistan

Question ID : 630680306028  
Option 1 ID : 6306801190465  
Option 2 ID : 6306801190467  
Option 3 ID : 6306801190466  
Option 4 ID : 6306801190468  
Status : Answered  
Chosen Option : 1

Q.11 Which of the following Governor-Generals of British India was in favour of free press and repealed the press regulations of 1823?

- Ans ☒ 1. Lord Lytton  
☒ 2. Lord Metcalfe  
☒ 3. Lord Ripon  
☒ 4. Lord Ellenborough

Question ID : 630680412398  
Option 1 ID : 6306801608417  
Option 2 ID : 6306801608415  
Option 3 ID : 6306801608416  
Option 4 ID : 6306801608418  
Status : Not Answered  
Chosen Option : --

Q.12 How many types of makeup (vesham) are used for the performers of Kathakali dance?

- Ans ☒ 1. 7  
☒ 2. 11  
☒ 3. 5  
☒ 4. 9

Question ID : 630680305964  
Option 1 ID : 6306801190210  
Option 2 ID : 6306801190212  
Option 3 ID : 6306801190209  
Option 4 ID : 6306801190211  
Status : Not Answered  
Chosen Option : --

Q.13 Epilimnetic, metalimnetic, and hypolimnetic water strata are example of:

- Ans ☒ 1. typical thermal stratification of a lake  
☒ 2. typical layers of hard rock  
☒ 3. various ecological phases  
☒ 4. different layers of underground water

Question ID : 630680407538  
Option 1 ID : 6306801589092  
Option 2 ID : 6306801589093  
Option 3 ID : 6306801589091  
Option 4 ID : 6306801589090  
Status : Not Answered  
Chosen Option : --

Q.14 Which of the following is correctly matched?

- Ans ☒ 1. Hariprasad Chaurasia – Sarood  
☒ 2. Zakir Husain – Sitar  
☒ 3. Bismillah Khan – Tabla  
☒ 4. Sultan Khan – Sarangi

Question ID : 630680409332  
Option 1 ID : 6306801596160  
Option 2 ID : 6306801596158  
Option 3 ID : 6306801596157  
Option 4 ID : 6306801596159  
Status : Not Answered  
Chosen Option : --

Q.15 Anup Rag Vilas' is a book written by which of the following musicians?

- Ans ☒ 1. Pandit Jasraj  
☒ 2. Pandit Birju Maharaj  
☒ 3. Pandit Kumar Gandharva  
☒ 4. Pandit Dinkar Kaikini

Question ID : 630680409248  
Option 1 ID : 6306801595824  
Option 2 ID : 6306801595821  
Option 3 ID : 6306801595823  
Option 4 ID : 6306801595822  
Status : Not Answered  
Chosen Option : --

Q.16 Which is an integral membrane protein that forms the tetramer and facilitates the diffusion of water and some small, unmodified solutes across cellular membranes?

- Ans ☒ 1. Immunoglobulins  
☒ 2. Aquaporins  
☒ 3. Mucins  
☒ 4. Transferrin

Question ID : 630680407440  
Option 1 ID : 6306801588699  
Option 2 ID : 6306801588698  
Option 3 ID : 6306801588700  
Option 4 ID : 6306801588701  
Status : Not Answered  
Chosen Option : --

Q.17 Identify the organelle present in plant cell that is not there in an animal cell.

- Ans ☒ 1. Plastids  
☒ 2. Nucleus  
☒ 3. Neuron  
☒ 4. Cytoplasm

Question ID : 630680407488  
Option 1 ID : 6306801588891  
Option 2 ID : 6306801588890  
Option 3 ID : 6306801588892  
Option 4 ID : 6306801588893  
Status : Answered  
Chosen Option : 1

Q.18 Who among the following physicists invented the voltaic pile, the forerunner of the modern battery, in 1800?

- Ans
- ☒ 1. Andre-Marie Ampere
  - ☒ 2. Hans Christian Oersted
  - ☒ 3. George Simon
  - ☒ 4. Alessandro Volta

Question ID : 63068070367  
Option 1 ID : 630680272094  
Option 2 ID : 630680272096  
Option 3 ID : 630680272095  
Option 4 ID : 630680272097  
Status : Not Answered  
Chosen Option : --

Q.19 Pandit Ravi Shankar, founder of National Orchestra of India, was a \_\_\_\_\_ player.

- Ans
- ☒ 1. Sitar
  - ☒ 2. Sarangi
  - ☒ 3. Sarod
  - ☒ 4. Flute

Question ID : 630680409247  
Option 1 ID : 6306801595819  
Option 2 ID : 6306801595818  
Option 3 ID : 6306801595820  
Option 4 ID : 6306801595817  
Status : Answered  
Chosen Option : 1

Q.20 According to Airports Authority of India, what is the total number of International airports in India as on 2022?

- Ans
- ☒ 1. 13
  - ☒ 2. 14
  - ☒ 3. 16
  - ☒ 4. 17

Question ID : 630680701462  
Option 1 ID : 6306802747781  
Option 2 ID : 6306802747782  
Option 3 ID : 6306802747783  
Option 4 ID : 6306802747784  
Status : Answered  
Chosen Option : 1

Q.21 Whose memoir is titled 'Once Upon a Life: Burnt Curry and Bloody Rags'?

- Ans
- ☒ 1. Easterine Kire
  - ☒ 2. Patricia Mukim
  - ☒ 3. Janice Pariat
  - ☒ 4. Temsula Ao

Question ID : 630680409384  
Option 1 ID : 6306801596366  
Option 2 ID : 6306801596365  
Option 3 ID : 6306801596367  
Option 4 ID : 6306801596368  
Status : Not Answered  
Chosen Option : --

**Q.22** Which of the following statements are correct regarding the jurisdiction of the Supreme Court of India?  
A.Original jurisdiction extends to any dispute between the Government of India and one or more States or between the Government of India and any State or States on one side and one or more States on the other or between two or more States.  
B.Appellate Jurisdiction extends when the Union plus some States are one side and some other States on the other side of the dispute.  
C.Under Articles 129 and 142 of the Constitution, the Supreme Court has been vested with the power to punish for contempt of court.  
D.As of now, the International Commercial Arbitration cannot be initiated in the Supreme Court.

- Ans ☒ 1. A and B only  
☒ 2. B and D only  
☒ 3. A and C only  
☒ 4. A, B, C and D

Question ID : 630680408317  
Option 1 ID : 6306801592166  
Option 2 ID : 6306801592165  
Option 3 ID : 6306801592164  
Option 4 ID : 6306801592163  
Status : Not Answered  
Chosen Option : --

**Q.23** Directive Principles of State Policy in India have been taken from the Constitution of which country?

- Ans ☒ 1. Britain  
☒ 2. USSR  
☒ 3. Ireland  
☒ 4. The US

Question ID : 630680408283  
Option 1 ID : 6306801592027  
Option 2 ID : 6306801592029  
Option 3 ID : 6306801592030  
Option 4 ID : 6306801592028  
Status : Answered  
Chosen Option : 3

**Q.24** What is the fourth step in mitosis where non-kinetochore spindle fibres lengthen and elongate the cell?

- Ans ☒ 1. Metaphase  
☒ 2. Prophase  
☒ 3. Telophase  
☒ 4. Anaphase

Question ID : 630680407477  
Option 1 ID : 6306801588849  
Option 2 ID : 6306801588847  
Option 3 ID : 6306801588848  
Option 4 ID : 6306801588846  
Status : Answered  
Chosen Option : 1

Q.25 Which of the following organic compounds is a benzenoid?

- Ans ☒ 1. Acetaldehyde  
☒ 2. Propane  
☒ 3. Hexane  
☒ 4. Aniline

Question ID : 630680210479

Option 1 ID : 630680816075

Option 2 ID : 630680816076

Option 3 ID : 630680816077

Option 4 ID : 630680816078

Status : Answered

Chosen Option : 2

Q.26 According to the Census of India 2011, 'Other Religions and Persuasions' formed what percentage of the country's population?

- Ans ☒ 1. 1.7  
☒ 2. 0.7  
☒ 3. 2.3  
☒ 4. 0.4

Question ID : 630680409713

Option 1 ID : 6306801597683

Option 2 ID : 6306801597681

Option 3 ID : 6306801597682

Option 4 ID : 6306801597684

Status : Not Answered

Chosen Option : --

Q.27 Which of the following countries will host the World Badminton Championship event 2026?

- Ans ☒ 1. Japan  
☒ 2. Indonesia  
☒ 3. India  
☒ 4. China

Question ID : 63068077627

Option 1 ID : 630680300606

Option 2 ID : 630680300608

Option 3 ID : 630680300605

Option 4 ID : 630680300607

Status : Not Answered

Chosen Option : --



Q.28 Choose the coasts that are running along the Arabian sea.  
a. Northern Circars  
b. Malabar  
c. Konkan  
d. Coromandel

Ans ☒ 1. Only b and c

☒ 2. Only a and c

☒ 3. b, c and d

☒ 4. a, b and c

Question ID : 630680407382

Option 1 ID : 6306801588468

Option 2 ID : 6306801588469

Option 3 ID : 6306801588467

Option 4 ID : 6306801588466

Status : Not Answered

Chosen Option : --

Q.29 Which of the following statement/statements is/are true regarding the light year?

1.Light year is a unit of distance.

2.Light is a unit of time.

3.A light year is the distance that light travels in one Earth year.

4.Light year is the measurement of light intensity.

Ans ☒ 1. Only 1 is correct

☒ 2. Only 1 and 2 are correct

☒ 3. Only 1 and 3 are correct

☒ 4. Only 2 is correct

Question ID : 630680100677

Option 1 ID : 630680391404

Option 2 ID : 630680391405

Option 3 ID : 630680391407

Option 4 ID : 630680391406

Status : Answered

Chosen Option : 3

Q.30 According to Agricultural Statistics at a Glance 2022, Government of India, which state recorded the highest production of sugarcane?

Ans ☒ 1. Karnataka

☒ 2. Gujarat

☒ 3. Uttar Pradesh

☒ 4. Maharashtra

Question ID : 630680409639

Option 1 ID : 6306801597386

Option 2 ID : 6306801597388

Option 3 ID : 6306801597385

Option 4 ID : 6306801597387

Status : Answered

Chosen Option : 3

Q.31 Which of the following states of India receives initial rainfall by the Arabian Sea branch of monsoon?

- Ans ☒ 1. Mizoram  
☒ 2. Tamil Nadu  
☒ 3. Kerala  
☒ 4. Assam

Question ID : 630680409668  
Option 1 ID : 6306801597504  
Option 2 ID : 6306801597503  
Option 3 ID : 6306801597502  
Option 4 ID : 6306801597501  
Status : Answered  
Chosen Option : 3

Q.32 Abolition of titles is mentioned in which Article of the Indian Constitution?

- Ans ☒ 1. Article 23  
☒ 2. Article 13  
☒ 3. Article 18  
☒ 4. Article 24

Question ID : 630680339462  
Option 1 ID : 6306801320420  
Option 2 ID : 6306801320417  
Option 3 ID : 6306801320418  
Option 4 ID : 6306801320419  
Status : Answered  
Chosen Option : 4

Q.33 In which amongst the following acts was Delhi declared the capital of British India in place of Calcutta?

- Ans ☒ 1. Government of India Act, 1858  
☒ 2. Government of India Act, 1935  
☒ 3. Morley - Minto Act, 1909  
☒ 4. Montagu Chelmsford Act, 1919

Question ID : 630680127635  
Option 1 ID : 630680494799  
Option 2 ID : 630680494798  
Option 3 ID : 630680494797  
Option 4 ID : 630680494796  
Status : Answered  
Chosen Option : 1

Q.34 Which Article of the Indian Constitution mentions about the salaries and allowances of the Chairman and Deputy Chairman of the Rajya Sabha and the Speaker and Deputy Speaker of the Lok Sabha?

Ans ☒ 1. Article 92

☒ 2. Article 97

☒ 3. Article 94

☒ 4. Article 95

Question ID : 630680408226

Option 1 ID : 6306801591800

Option 2 ID : 6306801591799

Option 3 ID : 6306801591801

Option 4 ID : 6306801591802

Status : Answered

Chosen Option : 1

Q.35 Which of the following Articles of the Indian Constitution mentions that the Vice-President of India shall be the ex officio Chairman of the Council of States?

Ans ☒ 1. Article 89

☒ 2. Article 92

☒ 3. Article 91

☒ 4. Article 90

Question ID : 630680408227

Option 1 ID : 6306801591803

Option 2 ID : 6306801591804

Option 3 ID : 6306801591805

Option 4 ID : 6306801591806

Status : Answered

Chosen Option : 2

Q.36 Under whose rule did the Mughal empire achieve its largest territorial limits?

Ans ☒ 1. Bahadur Shah II

☒ 2. Shah Jahan

☒ 3. Akbar

☒ 4. Aurangzeb

Question ID : 630680198454

Option 1 ID : 630680769778

Option 2 ID : 630680769775

Option 3 ID : 630680769776

Option 4 ID : 630680769777

Status : Answered

Chosen Option : 4

Q.37 Under the Bahmani kingdom, the provinces were administered by \_\_\_\_\_.

Ans ☒ 1. Afaquis

☒ 2. Tarafdars

☒ 3. Khalisa

☒ 4. Amirs

Question ID : 630680412506

Option 1 ID : 6306801608850

Option 2 ID : 6306801608847

Option 3 ID : 6306801608849

Option 4 ID : 6306801608848

Status : Not Answered

Chosen Option : --

Q.38 Who among the following has been elected as the 36th President of BCCI?

- Ans ☒ 1. Anil Kumble  
☒ 2. Roger Binny  
☒ 3. Sourav Ganguly  
☒ 4. Chetan Sharma

Question ID : 630680192739  
Option 1 ID : 630680747504  
Option 2 ID : 630680747501  
Option 3 ID : 630680747502  
Option 4 ID : 630680747503  
Status : Answered  
Chosen Option : 3

Q.39 Goga Navami, which is primarily celebrated in the Indian state of \_\_\_\_\_, is dedicated to the snake God, Gogaji.

- Ans ☒ 1. Andhra Pradesh  
☒ 2. Odisha  
☒ 3. Rajasthan  
☒ 4. Karnataka

Question ID : 630680410365  
Option 1 ID : 6306801600194  
Option 2 ID : 6306801600191  
Option 3 ID : 6306801600193  
Option 4 ID : 6306801600192  
Status : Answered  
Chosen Option : 3

Q.40 Which State was founded by Nizam-ul-Mulk in 1724?

- Ans ☒ 1. Awadh  
☒ 2. Hyderabad  
☒ 3. Mysore  
☒ 4. Bengal

Question ID : 630680309321  
Option 1 ID : 6306801203441  
Option 2 ID : 6306801203442  
Option 3 ID : 6306801203444  
Option 4 ID : 6306801203443  
Status : Answered  
Chosen Option : 2

Q.41 The 2026 Winter Olympics will be held in \_\_\_\_\_.

- Ans ☒ 1. The US  
☒ 2. Japan  
☒ 3. The UK  
☒ 4. Italy

Question ID : 63068094661  
Option 1 ID : 630680367339  
Option 2 ID : 630680367342  
Option 3 ID : 630680367340  
Option 4 ID : 630680367341  
Status : Answered  
Chosen Option : 1

Q.42 Select the correct statement/s from the following.  
i. In the Tenth Plan period, the Indian economy grew at 7.7% per year.  
ii. The targeted growth for the Eleventh Five Year Plan was 9% per year.  
iii. In the Ninth Plan period, India realised a growth of 7.5% per year.

- Ans ☒ 1. i and iii  
☒ 2. ii and iii  
☒ 3. Only iii  
☒ 4. i and ii

Question ID : 630680701668  
Option 1 ID : 6306802748619  
Option 2 ID : 6306802748618  
Option 3 ID : 6306802748620  
Option 4 ID : 6306802748617  
Status : Answered  
Chosen Option : 3

Q.43 Damodar Mauzo, who received the 57<sup>th</sup> Jnanpith Award, is primarily a/an \_\_\_\_\_ writer.

- Ans ☒ 1. Bengali  
☒ 2. Konkani  
☒ 3. Odia  
☒ 4. Maithili

Question ID : 630680701410  
Option 1 ID : 6306802747579  
Option 2 ID : 6306802747578  
Option 3 ID : 6306802747577  
Option 4 ID : 6306802747580  
Status : Answered  
Chosen Option : 1

Q.44 Which of the following was the port-city of the Pandyan Kingdom?

- Ans ☒ 1. Tenkasi  
☒ 2. Korkai  
☒ 3. Dindigul  
☒ 4. Virudhunagar

Question ID : 630680412348  
Option 1 ID : 6306801608217  
Option 2 ID : 6306801608215  
Option 3 ID : 6306801608218  
Option 4 ID : 6306801608216  
Status : Answered  
Chosen Option : 3

Q.45 In the context of local storms of hot weather season, Nor'Westers are:

- Ans ☒ 1. the dreaded evening thunderstorms in Bengal and Assam
- ☒ 2. a nearby wind that blows coffee flowers in Kerala
- ☒ 3. the hot, dry and oppressing winds blowing in the Northern plains from Punjab to Bihar with higher intensity between Delhi and Patna
- ☒ 4. the pre-monsoon showers that are a common phenomenon in Kerala and coastal areas of Karnataka

Question ID : 63068076867  
Option 1 ID : 630680297566  
Option 2 ID : 630680297568  
Option 3 ID : 630680297567  
Option 4 ID : 630680297565  
Status : Answered  
Chosen Option : 3

Q.46 Identify the device used to change the resistance in an electric circuit.

- Ans ☒ 1. Ammeter
- ☒ 2. Conductor
- ☒ 3. Rheostat
- ☒ 4. Voltmeter

Question ID : 63068099060  
Option 1 ID : 630680384945  
Option 2 ID : 630680384947  
Option 3 ID : 630680384944  
Option 4 ID : 630680384946  
Status : Answered  
Chosen Option : 3

Q.47 A choice of goals has been made in each Plan due to:

- Ans ☒ 1. unlimited manpower
- ☒ 2. limitation of resources
- ☒ 3. unlimited resources
- ☒ 4. limitation of choice

Question ID : 630680407123  
Option 1 ID : 6306801587437  
Option 2 ID : 6306801587436  
Option 3 ID : 6306801587434  
Option 4 ID : 6306801587435  
Status : Answered  
Chosen Option : 2

Q.48 Which of the following rivers is joined by river Chambal from the south?

- Ans ☒ 1. Teesta
- ☒ 2. Ganga
- ☒ 3. Yamuna
- ☒ 4. Kosi

Question ID : 630680701445  
Option 1 ID : 6306802747715  
Option 2 ID : 6306802747713  
Option 3 ID : 6306802747716  
Option 4 ID : 6306802747714  
Status : Answered  
Chosen Option : 1

**Q.49** According to the Global Hunger Index 2022, what is the rank of the neighbouring country, Bangladesh out of 121 countries?

- Ans
- ☒ 1. 99<sup>th</sup>
  - ☒ 2. 109<sup>th</sup>
  - ☒ 3. 107<sup>th</sup>
  - ☒ 4. 84<sup>th</sup>

Question ID : 630680327664  
Option 1 ID : 6306801274655  
Option 2 ID : 6306801274654  
Option 3 ID : 6306801274653  
Option 4 ID : 6306801274656  
Status : Not Answered  
Chosen Option : --

**Q.50** Good Friday is related to:

- Ans
- ☒ 1. Hindus
  - ☒ 2. Sikhs
  - ☒ 3. Jains
  - ☒ 4. Christians

Question ID : 630680409206  
Option 1 ID : 6306801595655  
Option 2 ID : 6306801595653  
Option 3 ID : 6306801595654  
Option 4 ID : 6306801595656  
Status : Answered  
Chosen Option : 4

Section : Quantitative Aptitude

**Q.1** Two similar triangles of  $\Delta XYZ$  and  $\Delta LMN$ . If area of  $(\Delta XYZ) = 16 \text{ cm}^2$ , area of  $(\Delta LMN) = 25 \text{ cm}^2$  and  $YZ = 2.4 \text{ cm}$ , then the measure of  $MN$  is:

- Ans
- ☒ 1. 3 cm
  - ☒ 2. 1 cm
  - ☒ 3. 4 cm
  - ☒ 4. 2 cm

Question ID : 630680421430  
Option 1 ID : 6306801644185  
Option 2 ID : 6306801644183  
Option 3 ID : 6306801644186  
Option 4 ID : 6306801644184  
Status : Answered  
Chosen Option : 1

Q.2 A train covers a distance of 56 km in 35 minutes. Travelling at the same speed, in how many seconds will the train cover a distance of 720 metres?

- Ans
- ☒ 1. 32
  - ☒ 2. 27
  - ☒ 3. 30
  - ☒ 4. 24

Question ID : 630680428439  
Option 1 ID : 6306801671800  
Option 2 ID : 6306801671803  
Option 3 ID : 6306801671801  
Option 4 ID : 6306801671802  
Status : Not Answered  
Chosen Option : --

Q.3 Simplify

$$\frac{92736}{(274+830) \text{ of } \frac{7}{4}} + 513$$

- Ans
- ☒ 1. 574
  - ☒ 2. 546
  - ☒ 3. 561
  - ☒ 4. 526

Question ID : 630680427967  
Option 1 ID : 6306801669912  
Option 2 ID : 6306801669914  
Option 3 ID : 6306801669913  
Option 4 ID : 6306801669915  
Status : Answered  
Chosen Option : 3

Q.4

If  $\tan \theta = \frac{3}{10}$ , then find the value of  $\frac{(1+\sin \theta)(1-\sin \theta)}{(1+\cos \theta)(1-\cos \theta)}$ .

- Ans
- ☒ 1.  $\frac{50}{3}$
  - ☒ 2.  $\frac{100}{7}$
  - ☒ 3.  $\frac{100}{9}$
  - ☒ 4.  $\frac{100}{3}$

Question ID : 630680421361  
Option 1 ID : 6306801643910  
Option 2 ID : 6306801643909  
Option 3 ID : 6306801643908  
Option 4 ID : 6306801643907  
Status : Answered  
Chosen Option : 3



Q.5 Study the given table and answer the question that follows.  
The table shows the number of students in various courses in various cities A, B, C, D and E in India during the academic year 2022-2023.

City	MBA	Science	Engineering	Medicine	MCA	Total
A	1200	2560	4520	1100	960	10340
B	1350	2650	5100	1050	850	11000
C	1250	2640	4580	1120	750	10340
D	1960	1250	3500	1850	1600	10160
E	1200	2100	3500	1960	1540	10300
Total	6960	11200	21200	7080	5700	

What was the average number of students in Science course in the all the cities altogether during the academic year 2022-2023?

- Ans
- ☒ 1. 2220
  - ☒ 2. 2200
  - ☒ 3. 2250
  - ☒ 4. 2240

Question ID : 630680428328  
Option 1 ID : 6306801671357  
Option 2 ID : 6306801671356  
Option 3 ID : 6306801671359  
Option 4 ID : 6306801671358  
Status : Answered  
Chosen Option : 3

Q.6 A man travels some distance at a speed of 12 km/h and returns at a speed of 8 km/h. If the total time taken by him is 3 hours and 45 minutes, then the total distance (in km) travelled is:

- Ans
- ☒ 1. 42
  - ☒ 2. 24
  - ☒ 3. 32
  - ☒ 4. 36

Question ID : 630680869703  
Option 1 ID : 6306803406181  
Option 2 ID : 6306803406178  
Option 3 ID : 6306803406179  
Option 4 ID : 6306803406180  
Status : Answered  
Chosen Option : 2

Q.7 If  $\tan\theta = 7/24$ , then find the value of  $(\cos^2\theta - \sin^2\theta)$ .

Ans ☒ 1. 1

☒ 2.  $\frac{520}{625}$

☒ 3.  $\frac{576}{550}$

☒ 4.  $\frac{527}{625}$

Question ID : 630680869590

Option 1 ID : 6306803405742

Option 2 ID : 6306803405744

Option 3 ID : 6306803405745

Option 4 ID : 6306803405743

Status : Answered

Chosen Option : 4

Q.8 A rectangular sheet of metal is 60 cm by 25 cm. Equal squares of side 5 cm are cut off at the corners and the remainder is folded up to form an open rectangular box. Find the volume of the box.

Ans ☒ 1. 3750 cm<sup>3</sup>

☒ 2. 5750 cm<sup>3</sup>

☒ 3. 4750 cm<sup>3</sup>

☒ 4. 2750 cm<sup>3</sup>

Question ID : 630680421559

Option 1 ID : 6306801644702

Option 2 ID : 6306801644701

Option 3 ID : 6306801644699

Option 4 ID : 6306801644700

Status : Not Answered

Chosen Option : --

Q.9 If 40% of A = 60% of B =  $\frac{1}{6}$  of C, then find the ratio of A:B:C.

Ans ☒ 1. 15:10:36

☒ 2. 36:10:15

☒ 3. 15:10:18

☒ 4. 10:15:36

Question ID : 630680429146

Option 1 ID : 6306801674629

Option 2 ID : 6306801674628

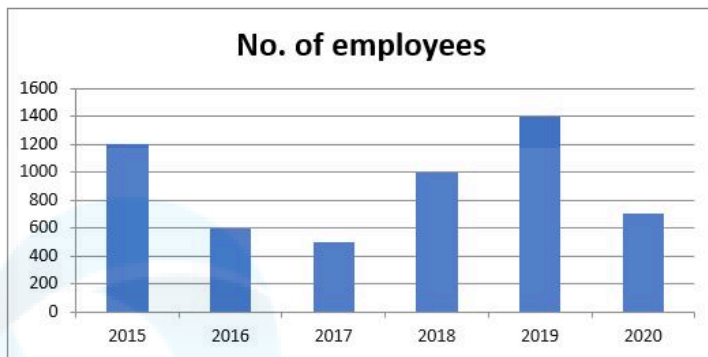
Option 3 ID : 6306801674631

Option 4 ID : 6306801674630

Status : Answered

Chosen Option : 3

**Q.10** The following bar graph shows the recruitment of employees in different years of a particular department.



The percentage increase in the recruitment of employees from 2017 to 2018 is:

- Ans**
- ☒ 1. 150%
  - ☒ 2. 130%
  - ☒ 3. 100%
  - ☒ 4. 120%

Question ID : 630680357955  
Option 1 ID : 6306801393810  
Option 2 ID : 6306801393812  
Option 3 ID : 6306801393809  
Option 4 ID : 6306801393811

Status : Answered

Chosen Option : 3

**Q.11** Simplify  $35 - [30 + \{10 + (12 - 10 - 4)\}]$ .

- Ans**
- ☒ 1. -3
  - ☒ 2. 2
  - ☒ 3. -2
  - ☒ 4. 3

Question ID : 630680428128  
Option 1 ID : 6306801670557  
Option 2 ID : 6306801670559  
Option 3 ID : 6306801670558  
Option 4 ID : 6306801670556

Status : Answered

Chosen Option : 1

**Q.12** A grocer purchased 10 kg rice for ₹700. He spends some amount on transportation and then sells it for ₹1,400. If the percentage of profit made by the grocer is 30%, then what is the amount (in ₹) he spends on transportation? (Round off to the nearest integer)

- Ans**
- ☒ 1. 300
  - ☒ 2. 380
  - ☒ 3. 377
  - ☒ 4. 350

Question ID : 630680869697  
Option 1 ID : 6306803406154  
Option 2 ID : 6306803406157  
Option 3 ID : 6306803406156  
Option 4 ID : 6306803406155

Status : Not Answered

Chosen Option : --

Q.13 If two circles of radii 35 cm and 25 cm touch each other externally, then the length (in cm) of a common tangent is (Rounded off to 2 decimal places)

Ans ☒ 1. 60.00

☒ 2. 59.16

☒ 3. 45.29

☒ 4. 52.25

Question ID : 630680421369

Option 1 ID : 6306801643940

Option 2 ID : 6306801643942

Option 3 ID : 6306801643941

Option 4 ID : 6306801643939

Status : Not Answered

Chosen Option : --

Q.14 If  $16x^4 + \frac{1}{16x^4} = 14159$ , then find the value of  $2x + \frac{1}{2x}$ .

Ans ☒ 1. 12

☒ 2. 11

☒ 3. 15

☒ 4. 9

Question ID : 630680413511

Option 1 ID : 6306801612870

Option 2 ID : 6306801612869

Option 3 ID : 6306801612871

Option 4 ID : 6306801612868

Status : Answered

Chosen Option : 2

Q.15 A man's speed in still water is 4 km/h more than the speed of the current. If the man takes a total of 10 h to cover 45 km downstream and 35 km upstream, then the speed of the man in still water is:

Ans ☒ 1. 15 km/h

☒ 2. 22 km/h

☒ 3. 18 km/h

☒ 4. 20 km/h

Question ID : 630680428839

Option 1 ID : 6306801673401

Option 2 ID : 6306801673402

Option 3 ID : 6306801673403

Option 4 ID : 6306801673400

Status : Not Answered

Chosen Option : --

Q.16 In a store, an item with marked price of ₹82,500 is available at a discounted price of ₹79,200. What is the percentage of discount given on that item?

Ans ☒ 1. 1%

☒ 2. 4%

☒ 3. 2%

☒ 4. 3%

Question ID : 630680428065

Option 1 ID : 6306801670304

Option 2 ID : 6306801670307

Option 3 ID : 6306801670305

Option 4 ID : 6306801670306

Status : Answered

Chosen Option : 2

Q.17 If 24 people can build 90 identical walls in 25 days, then how many more days will 27 people require to build 162 such walls?

Ans ☒ 1. 14

☒ 2. 13

☒ 3. 15

☒ 4. 16

Question ID : 630680428432

Option 1 ID : 6306801671772

Option 2 ID : 6306801671773

Option 3 ID : 6306801671774

Option 4 ID : 6306801671775

Status : Answered

Chosen Option : 2

Q.18 Find the surface area (in  $\text{cm}^2$ ) of a sphere of diameter 28 cm. (Use  $\pi = \frac{22}{7}$ )

Ans ☒ 1. 1731

☒ 2. 2856

☒ 3. 1724

☒ 4. 2464

Question ID : 630680421556

Option 1 ID : 6306801644690

Option 2 ID : 6306801644689

Option 3 ID : 6306801644687

Option 4 ID : 6306801644688

Status : Answered

Chosen Option : 4

Q.19 Simplify the following expression:  
$$\frac{(525 + 175)^2 - (525 - 175)^2}{(525 \times 175)}$$

- Ans
- ☒ 1. 700
  - ☒ 2. 4
  - ☒ 3. 2
  - ☒ 4. 350

Question ID : 630680413601  
Option 1 ID : 6306801613230  
Option 2 ID : 6306801613228  
Option 3 ID : 6306801613231  
Option 4 ID : 6306801613229  
Status : Answered  
Chosen Option : 4

Q.20 The population of a town increases 8% annually. If its present population is 1,42,560, what was the population one year ago?

- Ans
- ☒ 1. 1,33,000
  - ☒ 2. 1,34,000
  - ☒ 3. 1,31,000
  - ☒ 4. 1,32,000

Question ID : 630680120225  
Option 1 ID : 630680465935  
Option 2 ID : 630680465937  
Option 3 ID : 630680465934  
Option 4 ID : 630680465936  
Status : Answered  
Chosen Option : 4

Q.21 The value of  $5 + [6 + (3 + 5) \div 2] \div 2$  is equal to:

- Ans
- ☒ 1. 8
  - ☒ 2. 12
  - ☒ 3. 10
  - ☒ 4. 14

Question ID : 630680428247  
Option 1 ID : 6306801671035  
Option 2 ID : 6306801671033  
Option 3 ID : 6306801671034  
Option 4 ID : 6306801671032  
Status : Answered  
Chosen Option : 3

**Q.22** The following table shows the number of delivery partners (in thousands) who joined five different companies during six different years.

Year	Companies				
	Emazon	Clipkart	Twiggy	Tomato	Pyntra
2016	2.4	4.5	1.2	0.9	4.2
2017	1.8	5.4	1.5	1.2	5.6
2018	3.2	7.2	2.4	2.1	6.3
2019	3.9	5.6	2.8	2.7	6.5
2020	4.2	6.4	3.2	3.3	7.0
2021	5.0	7.2	3.6	3.6	7.2

If Emazon decides to give an average salary of a ₹21,000 to the delivery partners and allocates ₹13.44 crore for the same in 2022, find the percentage increase in the number of delivery partners from 2021 to 2022.

- Ans
- ☒ 1. 20%
  - ☒ 2. 25%
  - ☒ 3. 28%
  - ☒ 4. 22.5%

Question ID : 630680429267  
Option 1 ID : 6306801675112  
Option 2 ID : 6306801675114  
Option 3 ID : 6306801675115  
Option 4 ID : 6306801675113  
Status : Not Answered  
Chosen Option : --

**Q.23** If  $x + \frac{1}{x} = 2$ , then find the value of  $(x^4 + \frac{4}{(x)^4})(x^3 - \frac{4}{x^3})$ .

- Ans
- ☒ 1. -10
  - ☒ 2. 10
  - ☒ 3. -15
  - ☒ 4. 15

Question ID : 630680413572  
Option 1 ID : 6306801613112  
Option 2 ID : 6306801613113  
Option 3 ID : 6306801613114  
Option 4 ID : 6306801613115  
Status : Not Answered  
Chosen Option : --

**Q.24** In a  $\triangle ABC$ , angle  $BAC = 30^\circ$  and angle  $BCA = 60^\circ$ . If  $AC = 13$  cm and  $AB = 12$  cm, then  $BC$  is equal to:

- Ans
- ☒ 1. 7 cm
  - ☒ 2. 5 cm
  - ☒ 3. 4 cm
  - ☒ 4. 6 cm

Question ID : 630680421458  
Option 1 ID : 6306801644298  
Option 2 ID : 6306801644296  
Option 3 ID : 6306801644295  
Option 4 ID : 6306801644297  
Status : Answered  
Chosen Option : 2

Q.25 18 workers can complete a piece of work in 96 days. They start working together and after 26 days 10 more workers join them. In how many days in all will the work be completed?

- Ans ☒ 1. 72  
☒ 2. 69  
☒ 3. 71  
☒ 4. 70

Question ID : 630680428445  
Option 1 ID : 6306801671826  
Option 2 ID : 6306801671824  
Option 3 ID : 6306801671827  
Option 4 ID : 6306801671825  
Status : Not Answered  
Chosen Option : --

Q.26 Study the given table and answer the question that follows.  
The table shows the number of students in various courses in various cities A, B, C, D and E in India during the academic year 2022-2023.

City	MBA	Science	Engineering	Medicine	MCA	Total
A	1200	2560	4520	1100	960	10340
B	1350	2650	5100	1050	850	11000
C	1250	2640	4580	1120	750	10340
D	1960	1250	3500	1850	1600	10160
E	1200	2100	3500	1960	1540	10300
Total	6960	11200	21200	7080	5700	

In all the cities altogether, what is the difference between the students of science and those of MBA?

- Ans ☒ 1. 4240  
☒ 2. 4440  
☒ 3. 4540  
☒ 4. 4340

Question ID : 630680428327  
Option 1 ID : 6306801671355  
Option 2 ID : 6306801671353  
Option 3 ID : 6306801671352  
Option 4 ID : 6306801671354  
Status : Answered  
Chosen Option : 1

Q.27 A person deposited some amount of money in the bank at simple interest. After 20 years, the amount became nine times the amount deposited. In how many years will the amount become 13 times the amount if the interest rate remains the same?

- Ans ☒ 1. 28  
☒ 2. 30  
☒ 3. 25  
☒ 4. 23

Question ID : 630680427953  
Option 1 ID : 6306801669859  
Option 2 ID : 6306801669857  
Option 3 ID : 6306801669856  
Option 4 ID : 6306801669858  
Status : Answered  
Chosen Option : 3



Q.28 In alloys A and B, the ratio of lead to tin is 5 : 3 and 3 : 1, respectively. 80 kg of alloy A and 100 kg of alloy B are mixed together to form a new alloy. What is the amount of tin (in kg) in the new alloy?

- Ans ☒ 1. 90  
☒ 2. 55  
☒ 3. 81.3  
☒ 4. 68

Question ID : 630680869682  
Option 1 ID : 6306803406096  
Option 2 ID : 6306803406095  
Option 3 ID : 6306803406094  
Option 4 ID : 6306803406097  
Status : Not Answered  
Chosen Option : --

Q.29 In an election between two candidates, 10% of the voters did not cast their votes and 75 votes were found invalid. The winner got 50% of the total votes expected and won by 170 votes. How many voters were enrolled in the voters' list?

- Ans ☒ 1. 800  
☒ 2. 850  
☒ 3. 950  
☒ 4. 855

Question ID : 630680428871  
Option 1 ID : 6306801673530  
Option 2 ID : 6306801673528  
Option 3 ID : 6306801673529  
Option 4 ID : 6306801673531  
Status : Not Answered  
Chosen Option : --

Q.30 If the radius of a sphere is increased by 40%, then find the percentage increase in its surface area.

- Ans ☒ 1. 85%  
☒ 2. 88%  
☒ 3. 96%  
☒ 4. 92%

Question ID : 630680421631  
Option 1 ID : 6306801644987  
Option 2 ID : 6306801644988  
Option 3 ID : 6306801644990  
Option 4 ID : 6306801644989  
Status : Answered  
Chosen Option : 3

Q.31 The value of  $(4^2)^2 + 4 \times 4 \div 4 - 4$  is:

- Ans
- ☒ 1.  $4^0$
  - ☒ 2.  $4^2$
  - ☒ 3.  $4^3$
  - ☒ 4.  $4^4$

Question ID : 630680428203  
Option 1 ID : 6306801670859  
Option 2 ID : 6306801670856  
Option 3 ID : 6306801670858  
Option 4 ID : 6306801670857  
Status : Answered  
Chosen Option : 4

Q.32 A product was offered at a 10% trade discount on the marked price. After a cash discount of 10%, the product was sold for ₹7,290. The marked price (in ₹) is:

- Ans
- ☒ 1. 8,510
  - ☒ 2. 9,000
  - ☒ 3. 8,900
  - ☒ 4. 8,720

Question ID : 630680428604  
Option 1 ID : 6306801672460  
Option 2 ID : 6306801672463  
Option 3 ID : 6306801672462  
Option 4 ID : 6306801672461  
Status : Answered  
Chosen Option : 2

Q.33 R reaches office from home in 30 minutes and comes back in 20 minutes. The distance to his office from home is 12.5 km. What is his average speed (in km/h) from home to office and then back home?

- Ans
- ☒ 1. 30
  - ☒ 2. 60
  - ☒ 3. 25
  - ☒ 4. 20

Question ID : 630680428719  
Option 1 ID : 6306801672922  
Option 2 ID : 6306801672923  
Option 3 ID : 6306801672921  
Option 4 ID : 6306801672920  
Status : Not Answered  
Chosen Option : --

Q.34

The value of  $1 + \frac{1}{1 + \frac{1}{5 + \frac{1}{2 + \frac{1}{3}}}}$  is:

Ans

✗ 1.  $2\frac{11}{45}$

✓ 2.  $1\frac{38}{45}$

✗ 3.  $2\frac{17}{45}$

✗ 4.  $1\frac{13}{45}$

Question ID : 630680428271

Option 1 ID : 6306801671129

Option 2 ID : 6306801671128

Option 3 ID : 6306801671131

Option 4 ID : 6306801671130

Status : Not Answered

Chosen Option : --

Q.35 A dishonest dealer sells his goods at 20% loss on the cost price but uses a faulty weight that weighs 25% less. His profit or loss percentage (rounded off to 2 decimal places) is:

Ans ✓ 1. 6.67%, profit

✗ 2. 3.33%, profit

✗ 3. 3.33%, loss

✗ 4. 6.67%, loss

Question ID : 630680429104

Option 1 ID : 6306801674461

Option 2 ID : 6306801674463

Option 3 ID : 6306801674462

Option 4 ID : 6306801674460

Status : Answered

Chosen Option : 1

Q.36 Which of the following is true when  $x = \sin A + \cos A$ ;  $y = \sec A + \operatorname{cosec} A$ ?

Ans ✓ 1.  $y + 2x = x^2 y$

✗ 2.  $y(1 + x^2) = 2x$

✗ 3.  $y(1 - 2x^2) = x$

✗ 4.  $y - 2x = x^2 y$

Question ID : 630680183250

Option 1 ID : 630680710071

Option 2 ID : 630680710070

Option 3 ID : 630680710072

Option 4 ID : 630680710069

Status : Not Answered

Chosen Option : --

Q.37 In an election, A received 27% of the votes and B received 125,982 votes. 19% did not cast their votes. Find the number of votes received by A.

Ans ☒ 1. 1,88,973

☒ 2. 62,991

☒ 3. 57,827

☒ 4. 44,327

Question ID : 630680428145

Option 1 ID : 6306801670624

Option 2 ID : 6306801670626

Option 3 ID : 6306801670627

Option 4 ID : 6306801670625

Status : Answered

Chosen Option : 2

Q.38 Simplify  $[(38 - (-6)) \times \{9 - (8 - 1)\}] \div [4 \times \{6 + (-4)\}]$ .

Ans ☒ 1. 14

☒ 2. 18

☒ 3. 11

☒ 4. 22

Question ID : 630680428120

Option 1 ID : 6306801670526

Option 2 ID : 6306801670527

Option 3 ID : 6306801670524

Option 4 ID : 6306801670525

Status : Answered

Chosen Option : 3

Q.39 Mitu can do a piece of work in 12 hours, Titu and Situ together in 2 hours, and Mitu and Situ together in 3 hours. How long will Titu alone take to do it?

Ans ☒ 1. 6 hours

☒ 2. 4 hours

☒ 3. 7 hours

☒ 4. 8 hours

Question ID : 630680869702

Option 1 ID : 6306803406174

Option 2 ID : 6306803406176

Option 3 ID : 6306803406177

Option 4 ID : 6306803406175

Status : Answered

Chosen Option : 2

Q.40 Triangle DEF is an equilateral triangle with a side length of 12 cm. If point G is the mid-point of side DE, what is the length (in cm) of side FG?

- Ans
- ☒ 1. 12
  - ☒ 2.  $6\sqrt{3}$
  - ☒ 3. 6
  - ☒ 4.  $3\sqrt{6}$

Question ID : 630680421465  
Option 1 ID : 6306801644323  
Option 2 ID : 6306801644324  
Option 3 ID : 6306801644326  
Option 4 ID : 6306801644325

Status : Answered  
Chosen Option : 2

Q.41 The ratio of marks of A and B is 3 : 4 and the ratio of marks of B and C is 4 : 5. If the difference in the marks of C and A is 30, then how much marks does B get?

- Ans
- ☒ 1. 52
  - ☒ 2. 60
  - ☒ 3. 56
  - ☒ 4. 64

Question ID : 630680428949  
Option 1 ID : 6306801673841  
Option 2 ID : 6306801673843  
Option 3 ID : 6306801673842  
Option 4 ID : 6306801673840

Status : Answered  
Chosen Option : 2

Q.42 The value of  $\frac{1}{4} + \frac{2}{5} \div \left[ \left\{ 2\frac{1}{5} - 2 \right\} \times 5 \right] - \frac{2}{3}$  of  $\frac{3}{5}$  is:

- Ans
- ☒ 1.  $\frac{2}{3}$
  - ☒ 2.  $\frac{1}{4}$
  - ☒ 3.  $\frac{3}{5}$
  - ☒ 4.  $\frac{5}{6}$

Question ID : 630680285354  
Option 1 ID : 6306801109394  
Option 2 ID : 6306801109393  
Option 3 ID : 6306801109391  
Option 4 ID : 6306801109392

Status : Answered  
Chosen Option : 2

**Q.43** The following table shows the number of teachers in four colleges (male and female) and the percentage of trained teachers among them.

Colleges	Male		Female	
	No. of Teachers	% of Trained Teachers	No. of Teachers	% of Trained Teachers
A	225	44	175	40
B	250	30	128	25
C	290	55	100	45
D	350	60	150	30

What is the total number of non-trained male teachers in college A and non-trained female teachers in college B?

- Ans**    ☒ 1. 222  
          ☐ 2. 230  
          ☐ 3. 224  
          ☐ 4. 228

Question ID : 630680357953  
Option 1 ID : 6306801393804  
Option 2 ID : 6306801393801  
Option 3 ID : 6306801393803  
Option 4 ID : 6306801393802  
Status : Answered  
Chosen Option : 1

**Q.44** Find the maximum value of  
(19 sin θ + 6 cot θ sin θ).

- Ans**    ☐ 1.  $\sqrt{197}$   
          ☒ 2.  $\sqrt{397}$   
          ☐ 3.  $\sqrt{497}$   
          ☐ 4.  $\sqrt{297}$

Question ID : 630680421363  
Option 1 ID : 6306801643917  
Option 2 ID : 6306801643915  
Option 3 ID : 6306801643918  
Option 4 ID : 6306801643916  
Status : Answered  
Chosen Option : 2

**Q.45** A drainage tile is a cylindrical shell 42 cm long. The inside and outside diameters are 8 cm and 14 cm, respectively. What is the volume (in  $\text{cm}^3$ ) of clay required for the tile? (Use  $\pi = \frac{22}{7}$ )

- Ans** ☒ 1. 4125  
☒ 2. 4881  
☒ 3. 4356  
☒ 4. 5241

Question ID : 630680421353  
Option 1 ID : 6306801643878  
Option 2 ID : 6306801643876  
Option 3 ID : 6306801643877  
Option 4 ID : 6306801643875  
Status : Not Answered  
Chosen Option : --

**Q.46** Simplify  $22 \times 10 \div 5 \times 2 + 12$ .

- Ans** ☒ 1. 101  
☒ 2. 103  
☒ 3. 100  
☒ 4. 102

Question ID : 630680428122  
Option 1 ID : 6306801670532  
Option 2 ID : 6306801670534  
Option 3 ID : 6306801670533  
Option 4 ID : 6306801670535  
Status : Answered  
Chosen Option : 3

**Q.47** Study the given table and answer the question that follows.  
The table shows the production of five types of cars P, Q, R, S and T by a company from the year 1989 to 1994.

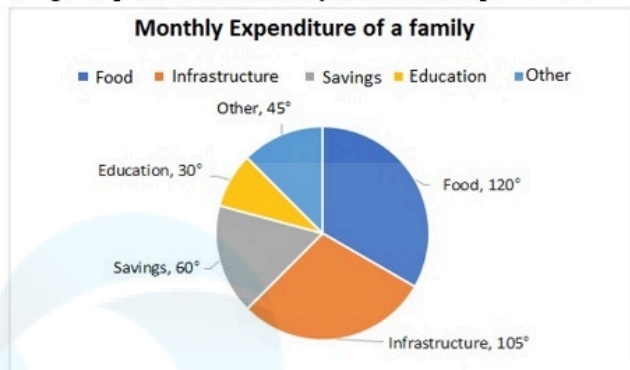
Type of Car	1989	1990	1991	1992	1993	1994	Total
P	8	20	16	17	21	6	88
Q	16	10	14	12	12	14	78
R	21	17	16	15	13	8	90
S	4	6	10	16	20	31	87
T	25	18	19	30	14	27	133
Total	74	71	75	90	80	86	476

In which year was the total production of cars of types P and Q together equal to the total production of cars of types R and S together?

- Ans** ☒ 1. 1992  
☒ 2. 1991  
☒ 3. 1993  
☒ 4. 1989

Question ID : 630680428330  
Option 1 ID : 6306801671366  
Option 2 ID : 6306801671365  
Option 3 ID : 6306801671367  
Option 4 ID : 6306801671364  
Status : Not Answered  
Chosen Option : --

- Q.48** The savings and expenditure of a family in a month on different heads is shown in the given pie chart. The family saves ₹8,000 per month.



Find the total monthly expenditure (in ₹) of the family.

- Ans** ☒ 1. 30000  
☒ 2. 40000  
☒ 3. 35000  
☒ 4. 25000

Question ID : 630680176355

Option 1 ID : 630680683650

Option 2 ID : 630680683648

Option 3 ID : 630680683649

Option 4 ID : 630680683651

Status : Not Answered

Chosen Option : --

- Q.49** If the surface areas of two spheres are in the ratio of 9: 49, then the ratio of their volumes is: (Where  $\pi = \frac{22}{7}$ )

- Ans** ☒ 1. 27 : 343  
☒ 2. 16 : 216  
☒ 3. 25 : 512  
☒ 4. 49 : 363

Question ID : 630680421615

Option 1 ID : 6306801644924

Option 2 ID : 6306801644923

Option 3 ID : 6306801644925

Option 4 ID : 6306801644926

Status : Answered

Chosen Option : 1

- Q.50** The value of  $9 \times 9 + 9 \div 9 - 9 \times 9 + 9 + 9 \times 9 - 9 - 9 \times 9$  is:

- Ans** ☒ 1. 9  
☒ 2. 81  
☒ 3. 1  
☒ 4. 0

Question ID : 630680428264

Option 1 ID : 6306801671102

Option 2 ID : 6306801671103

Option 3 ID : 6306801671101

Option 4 ID : 6306801671100

Status : Answered

Chosen Option : 3



**Q.1** Select the most appropriate idiom that can substitute the underlined segment in the given sentence and complete the sentence correctly.

It is important to take this opportunity to make a name for yourself – beat around the bush.

- Ans**    ☒ 1. strike while the iron is hot  
          ☐ 2. fight tooth and claw  
          ☐ 3. pass with flying colours  
          ☐ 4. bare the foot

Question ID : 630680517345  
Option 1 ID : 6306802021778  
Option 2 ID : 6306802021776  
Option 3 ID : 6306802021779  
Option 4 ID : 6306802021777  
Status : Answered  
Chosen Option : 1

**Q.2** Select the word from the sentence below, which is an antonym for the word 'resolve'  
My cousin Nisha's curiosity about life will never be satisfied because no one knows all the answers to all her questions.

- Ans**    ☐ 1. About  
          ☒ 2. Questions  
          ☐ 3. Knows  
          ☐ 4. Satisfied

Question ID : 630680517333  
Option 1 ID : 6306802021728  
Option 2 ID : 6306802021731  
Option 3 ID : 6306802021730  
Option 4 ID : 6306802021729  
Status : Answered  
Chosen Option : 3

**Q.3** Select the word from the sentence below, which is an antonym for the word 'advance'.  
Clive is a travel blogger who believes that with even an elementary or intermediate Knowledge of the local language, you can enjoy your travel more.

- Ans**    ☐ 1. Destination  
          ☐ 2. Believes  
          ☒ 3. Elementary  
          ☐ 4. knowledge

Question ID : 630680517334  
Option 1 ID : 6306802021735  
Option 2 ID : 6306802021732  
Option 3 ID : 6306802021733  
Option 4 ID : 6306802021734  
Status : Answered  
Chosen Option : 3

**Q.4** Select the most appropriate option that can substitute the underlined segment in the given sentence.  
Last night, I failed to sleep because of some familiar issues that couldn't be avoided.

- Ans
- ☒ 1. unthinkable
  - ☒ 2. unsolvable
  - ☒ 3. inevitable
  - ☒ 4. incapable

Question ID : 630680414575  
Option 1 ID : 6306801617052  
Option 2 ID : 6306801617051  
Option 3 ID : 6306801617053  
Option 4 ID : 6306801617054  
Status : Answered  
Chosen Option : 3

**Q.5** Select the option that will improve the underlined part of the given sentence.  
My friend vanished when the goons came to fight with me.

- Ans
- ☒ 1. mobilised when the thugs arrived
  - ☒ 2. disappeared when the thugs arrived
  - ☒ 3. condemned when the thugs arrived
  - ☒ 4. attacked when the thugs arrived

Question ID : 630680414504  
Option 1 ID : 6306801616778  
Option 2 ID : 6306801616775  
Option 3 ID : 6306801616777  
Option 4 ID : 6306801616776  
Status : Answered  
Chosen Option : 2

**Q.6** Select the option that rectifies the spelling error in the given sentence.  
The phone rang, but nobody awnsered.

- Ans
- ☒ 1. awmsered
  - ☒ 2. answered
  - ☒ 3. answorded
  - ☒ 4. answered

Question ID : 630680517473  
Option 1 ID : 6306802022289  
Option 2 ID : 6306802022288  
Option 3 ID : 6306802022290  
Option 4 ID : 6306802022291  
Status : Answered  
Chosen Option : 4

Q.7 Select the most appropriate idiom for the given situation focusing on the underlined words.

I invited them to my anniversary dinner but they had other plans, so they decided to politely decline with the implication that they may come at a later date.

- Ans
- ☒ 1. To spoil a moment
  - ☒ 2. To take a rain check
  - ☒ 3. Call it a day
  - ☒ 4. Took it with a grain of salt

Question ID : 630680517363  
Option 1 ID : 6306802021848  
Option 2 ID : 6306802021850  
Option 3 ID : 6306802021851  
Option 4 ID : 6306802021849  
Status : Answered  
Chosen Option : 4

Q.8 Select the option that can be used as a one-word substitute for the given group of words.  
A lively, cheerful outgoing person.

- Ans
- ☒ 1. Orator
  - ☒ 2. Ambivert
  - ☒ 3. Extrovert
  - ☒ 4. Introvert

Question ID : 630680414531  
Option 1 ID : 6306801616885  
Option 2 ID : 6306801616886  
Option 3 ID : 6306801616883  
Option 4 ID : 6306801616884  
Status : Answered  
Chosen Option : 3

Q.9 Select the most appropriate meaning of the given idiom.  
Gift of the gab

- Ans
- ☒ 1. A gift for a person named Gab
  - ☒ 2. A talent for speaking
  - ☒ 3. A talent for lying
  - ☒ 4. A talent for singing

Question ID : 630680167283  
Option 1 ID : 630680647904  
Option 2 ID : 630680647905  
Option 3 ID : 630680647906  
Option 4 ID : 630680647907  
Status : Answered  
Chosen Option : 2

Q.10 What is the most appropriate ANTONYM of the word 'fluctuate'?

- Ans    ✓ 1. Stabilise  
         ✗ 2. Deflect  
         ✗ 3. Fickle  
         ✗ 4. Vacillate

Question ID : 630680409895  
Option 1 ID : 6306801598409  
Option 2 ID : 6306801598411  
Option 3 ID : 6306801598410  
Option 4 ID : 6306801598412  
Status : Answered  
Chosen Option : 1

Q.11 Parts of the following sentences have been given as options. Select the option that contains a grammatical error.

Ms. Malathi is living lonely in an apartment.

- Ans    ✗ 1. is living  
         ✓ 2. lonely in  
         ✗ 3. Ms. Malathi  
         ✗ 4. an apartment

Question ID : 630680146964  
Option 1 ID : 630680568695  
Option 2 ID : 630680568696  
Option 3 ID : 630680568694  
Option 4 ID : 630680568697  
Status : Answered  
Chosen Option : 2

Q.12 Select the most appropriate idiomatic expression that can substitute the underlined segment in the given sentence.

He is very strict with his students but good-natured.

- Ans    ✗ 1. his eyes are bigger than his stomach  
         ✓ 2. his heart is in the right place  
         ✗ 3. he has a big mouth  
         ✗ 4. his heart misses a beat

Question ID : 630680166223  
Option 1 ID : 630680643866  
Option 2 ID : 630680643864  
Option 3 ID : 630680643867  
Option 4 ID : 630680643865  
Status : Answered  
Chosen Option : 2

**Q.13** The following sentence has been split into four segments. Identify the segment that contains a spelling error.  
The dried raisons / have an intoxicating /effect on humans as / well as flora and fauna.

- Ans
- ☒ 1. have an intoxicating
  - ☒ 2. The dried raisons
  - ☒ 3. effect on humans as
  - ☒ 4. well as flora and fauna.

Question ID : 630680518782  
Option 1 ID : 6306802027625  
Option 2 ID : 6306802027624  
Option 3 ID : 6306802027626  
Option 4 ID : 6306802027627  
Status : Answered  
Chosen Option : 3

**Q.14** Select the INCORRECTLY spelt word in the given sentence.  
Every season the river overflows its banks and when it goes down it leaves silt for crops to be gruwn.

- Ans
- ☒ 1. Gruwn
  - ☒ 2. Season
  - ☒ 3. Overflows
  - ☒ 4. Silt

Question ID : 630680396918  
Option 1 ID : 6306801547741  
Option 2 ID : 6306801547740  
Option 3 ID : 6306801547743  
Option 4 ID : 6306801547742  
Status : Answered  
Chosen Option : 1

**Q.15** Select the most appropriate idiom that can substitute the underlined segment in the given sentence.  
Popular cosmetics brands in India are very expensive.

- Ans
- ☒ 1. up in arms
  - ☒ 2. flog a dead horse
  - ☒ 3. take it with a pinch of salt
  - ☒ 4. cost an arm and a leg

Question ID : 630680517318  
Option 1 ID : 6306802021671  
Option 2 ID : 6306802021670  
Option 3 ID : 6306802021668  
Option 4 ID : 6306802021669  
Status : Answered  
Chosen Option : 4

Q.16 Select the most appropriate segment to substitute the underlined words in the given sentence.

After he leave, we discussed his suggestion.

- Ans
- ☒ 1. he will be leaving
  - ☒ 2. he has left
  - ☒ 3. he had left
  - ☒ 4. he was leaving

Question ID : 630680436024  
Option 1 ID : 6306801702040  
Option 2 ID : 6306801702037  
Option 3 ID : 6306801702039  
Option 4 ID : 6306801702038  
Status : Answered  
Chosen Option : 3

Q.17 Select the most appropriate ANTONYM of the given word.

Confound

- Ans
- ☒ 1. Expire
  - ☒ 2. Discern
  - ☒ 3. Assure
  - ☒ 4. Suppress

Question ID : 630680435583  
Option 1 ID : 6306801700267  
Option 2 ID : 6306801700265  
Option 3 ID : 6306801700268  
Option 4 ID : 6306801700266  
Status : Answered  
Chosen Option : 3

Q.18 Select the option that can be used as a one-word substitute for the given group of words.

Weak and cowardly

- Ans
- ☒ 1. Pusillanimous
  - ☒ 2. Meek
  - ☒ 3. Timid
  - ☒ 4. Anxious

Question ID : 630680176617  
Option 1 ID : 630680684690  
Option 2 ID : 630680684688  
Option 3 ID : 630680684691  
Option 4 ID : 630680684689  
Status : Answered  
Chosen Option : 3

Q.19 Select the INCORRECTLY spelt word.

- Ans    ✓ 1. Bycycle  
         ✗ 2. Academy  
         ✗ 3. Mystery  
         ✗ 4. Justice

Question ID : 630680517477  
Option 1 ID : 6306802022306  
Option 2 ID : 6306802022307  
Option 3 ID : 6306802022304  
Option 4 ID : 6306802022305  
Status : Answered  
Chosen Option : 1

Q.20 Select the INCORRECTLY spelt word.

- Ans    ✓ 1. Neccessity  
         ✗ 2. Perseverance  
         ✗ 3. Hierarchy  
         ✗ 4. Knowledgeable

Question ID : 630680410008  
Option 1 ID : 6306801598863  
Option 2 ID : 6306801598864  
Option 3 ID : 6306801598861  
Option 4 ID : 6306801598862  
Status : Answered  
Chosen Option : 4

Q.21 Select the option that can be used as a one-word substitute for the given group of words.

A lover of mankind

- Ans    ✗ 1. Recluse  
         ✗ 2. Cynic  
         ✗ 3. Psychiatrist  
         ✓ 4. Philanthropist

Question ID : 630680414800  
Option 1 ID : 6306801617943  
Option 2 ID : 6306801617945  
Option 3 ID : 6306801617944  
Option 4 ID : 6306801617946  
Status : Answered  
Chosen Option : 4

**Q.22** Select the most appropriate option that can substitute the underlined words in the given sentence.

Though very informative, Shweta's article was mercilessly rejected of the editor.

- Ans
- ☒ 1. was mercilessly rejected of
  - ☒ 2. was mercilessly rejected on
  - ☒ 3. was mercilessly rejected each
  - ☒ 4. was mercilessly rejected by

Question ID : 630680182093

Option 1 ID : 630680705596

Option 2 ID : 630680705594

Option 3 ID : 630680705597

Option 4 ID : 630680705595

Status : Answered

Chosen Option : 4

**Q.23** Select the most appropriate meaning of the given idiom.  
To leave no stone unturned

- Ans
- ☒ 1. To win everything that is available
  - ☒ 2. To control a person completely
  - ☒ 3. To do everything possible to achieve something
  - ☒ 4. To treat someone/something as if of no importance

Question ID : 630680195032

Option 1 ID : 630680756619

Option 2 ID : 630680756617

Option 3 ID : 630680756618

Option 4 ID : 630680756620

Status : Answered

Chosen Option : 3

**Q.24** Select the most appropriate synonym of the underlined word in the given sentence.  
The environmental organisation issued a statement to condemn the deforestation happening in the protected area.

- Ans
- ☒ 1. Censure
  - ☒ 2. Persuade
  - ☒ 3. Foster
  - ☒ 4. Compel

Question ID : 630680383231

Option 1 ID : 6306801493834

Option 2 ID : 6306801493833

Option 3 ID : 6306801493831

Option 4 ID : 6306801493832

Status : Answered

Chosen Option : 1



Q.25 Select the option that can be used as a one-word substitute for the underlined words.  
He was promoted to a higher position in the first year due to his careful nature and hard-working efforts.

- Ans ☒ 1. business mindedness  
☒ 2. extraordinary  
☒ 3. elegance  
☒ 4. diligence

Question ID : 630680414578  
Option 1 ID : 6306801617064  
Option 2 ID : 6306801617066  
Option 3 ID : 6306801617065  
Option 4 ID : 6306801617063  
Status : Answered  
Chosen Option : 2

Q.26 Parts of the given sentence have been underlined. One of them contains an error.  
Select the option that has the segment with a grammatical error.  
The art historian argued that the painting's value has been greatly underestimated,  
and that its unique style and technique deserved recognition from the art community  
and the public alike.

- Ans ☒ 1. its unique style and technique  
☒ 2. has been greatly underestimated  
☒ 3. recognition from the art community  
☒ 4. and the public alike

Question ID : 630680415364  
Option 1 ID : 6306801620204  
Option 2 ID : 6306801620203  
Option 3 ID : 6306801620205  
Option 4 ID : 6306801620206  
Status : Answered  
Chosen Option : 1

Q.27 Select the most appropriate synonym of the given word.  
Mourn

- Ans ☒ 1. Dread  
☒ 2. Amuse  
☒ 3. Grieve  
☒ 4. Approve

Question ID : 630680310013  
Option 1 ID : 6306801206200  
Option 2 ID : 6306801206198  
Option 3 ID : 6306801206197  
Option 4 ID : 6306801206199  
Status : Answered  
Chosen Option : 3

Q.28 Select the most appropriate idiom to fill in the blank.  
When I went to Egypt and lost my wallet and passport, I was \_\_\_\_\_.

- Ans
- ☐ 1. rolling up my sleeves
  - ☐ 2. putting my nose to the grindstone
  - ☐ 3. working my fingers to the bone
  - ☒ 4. up in a creek without a paddle

Question ID : 630680445913  
Option 1 ID : 6306801740994  
Option 2 ID : 6306801740992  
Option 3 ID : 6306801740993  
Option 4 ID : 6306801740995  
Status : Answered  
Chosen Option : 3

Q.29 Select the most appropriate ANTONYM of the given word.  
Oral

- Ans
- ☐ 1. Verbal
  - ☒ 2. Inscribed
  - ☐ 3. Obligatory
  - ☐ 4. Dejected

Question ID : 630680295215  
Option 1 ID : 6306801148584  
Option 2 ID : 6306801148585  
Option 3 ID : 6306801148586  
Option 4 ID : 6306801148587  
Status : Answered  
Chosen Option : 2

Q.30 The following sentence has been divided into parts. One of them contains an error.  
Select the part that contains the error from the given options.  
Mr. Vinu / has never / slept in / a igloo.

- Ans
- ☐ 1. slept in
  - ☒ 2. a igloo
  - ☐ 3. Mr. Vinu
  - ☐ 4. has never

Question ID : 630680184892  
Option 1 ID : 630680716531  
Option 2 ID : 630680716532  
Option 3 ID : 630680716529  
Option 4 ID : 630680716530  
Status : Answered  
Chosen Option : 2

Q.31 Select the most appropriate idiom to fill in the blank.

John was always \_\_\_\_\_ about becoming a millionaire without doing any hard work.

- Ans
- ☐ 1. a storm in a tea cup
  - ☐ 2. eating like a horse
  - ☒ 3. building castles in the air
  - ☐ 4. having an ace up his sleeve

Question ID : 630680517407  
Option 1 ID : 6306802022027  
Option 2 ID : 6306802022025  
Option 3 ID : 6306802022024  
Option 4 ID : 6306802022026  
Status : Answered  
Chosen Option : 3

Q.32 Select the most appropriate option that can substitute the underlined segment in the given sentence.

No sooner had she finished her breakfast that she had received a phone call from her boss, informing her that she needed to come to work immediately.

- Ans
- ☐ 1. that she received
  - ☐ 2. that she receives
  - ☐ 3. than she receives
  - ☒ 4. than she received

Question ID : 630680414517  
Option 1 ID : 6306801616829  
Option 2 ID : 6306801616830  
Option 3 ID : 6306801616827  
Option 4 ID : 6306801616828  
Status : Answered  
Chosen Option : 4

Q.33 Select the most appropriate option that can substitute the underlined segment in the given sentence. If there is no need to substitute it, select 'No substitution'.

If I was very rich, I would spend all my time and money for the poor.

- Ans
- ☐ 1. No substitution
  - ☒ 2. If I were very rich
  - ☐ 3. If I have much riches
  - ☐ 4. If I am very rich

Question ID : 630680414537  
Option 1 ID : 6306801616910  
Option 2 ID : 6306801616908  
Option 3 ID : 6306801616909  
Option 4 ID : 6306801616907  
Status : Answered  
Chosen Option : 2

Q.34 Parts of the following sentence have been given as options. Select the option that contains an error.  
My neighbours were serious injured in the car accident.

- Ans    ✓ 1. serious injured  
      ✗ 2. My neighbours were  
      ✗ 3. the car accident  
      ✗ 4. in

Question ID : 630680154843  
Option 1 ID : 630680599169  
Option 2 ID : 630680599168  
Option 3 ID : 630680599171  
Option 4 ID : 630680599170  
Status : Answered  
Chosen Option : 1

Q.35 Select the most appropriate idiom that can substitute the underlined segment in the given sentence.

The players like the coach because he is honest, realistic and practical in dealing with them.

- Ans    ✓ 1. down to earth  
      ✗ 2. by and large  
      ✗ 3. far and wide  
      ✗ 4. sick and tired

Question ID : 630680435642  
Option 1 ID : 6306801700499  
Option 2 ID : 6306801700498  
Option 3 ID : 6306801700500  
Option 4 ID : 6306801700497  
Status : Answered  
Chosen Option : 2

Q.36 Identify the most appropriate antonym of the given word.

Rapid

- Ans    ✗ 1. active  
      ✗ 2. smart  
      ✗ 3. lately  
      ✓ 4. slow

Question ID : 630680517350  
Option 1 ID : 6306802021798  
Option 2 ID : 6306802021799  
Option 3 ID : 6306802021796  
Option 4 ID : 6306802021797  
Status : Answered  
Chosen Option : 4

**Q.37** The following sentence has been divided into four segments. Identify the segment that has a grammatical error.  
I am working with him since 2002, / but even today / I am unable / to understand his motives.

- Ans** ☒ 1. I am unable  
☒ 2. I am working with him since 2002,  
☒ 3. to understand his motives.  
☒ 4. but even today

Question ID : 630680191737  
Option 1 ID : 630680743559  
Option 2 ID : 630680743557  
Option 3 ID : 630680743560  
Option 4 ID : 630680743558  
Status : Answered  
Chosen Option : 3

**Q.38** Select the option that can be used as a one-word substitute for the given group of words.  
An area/place in which dead bodies are buried

- Ans** ☒ 1. Demise  
☒ 2. Cemetery  
☒ 3. Mansion  
☒ 4. Clementi

Question ID : 630680414623  
Option 1 ID : 6306801617237  
Option 2 ID : 6306801617235  
Option 3 ID : 6306801617238  
Option 4 ID : 6306801617236  
Status : Answered  
Chosen Option : 2

**Q.39** Underlined word in the sentence is not spelt correctly. Identify the correct spelling from the options given below.  
Raman had been living a reklusive life since he had lost his job.

- Ans** ☒ 1. Recslusive  
☒ 2. Reclucive  
☒ 3. Reslusive  
☒ 4. Reclusive

Question ID : 630680409865  
Option 1 ID : 6306801598291  
Option 2 ID : 6306801598289  
Option 3 ID : 6306801598290  
Option 4 ID : 6306801598292  
Status : Answered  
Chosen Option : 4

Q.40 Select the most appropriate ANTONYM of the given word.

Convalesce

- Ans    ☒ 1. Collapse  
         ☐ 2. Conceal  
         ☐ 3. Corrupt  
         ☐ 4. Confront

Question ID : 630680435591  
Option 1 ID : 6306801700299  
Option 2 ID : 6306801700300  
Option 3 ID : 6306801700297  
Option 4 ID : 6306801700298  
Status : Answered  
Chosen Option : 4

Comprehension:

In the following passage, some words have been deleted. Read the passage carefully and select the most appropriate option to fill in each blank.  
Why do people yawn? No one seems to know the exact (1)\_\_\_\_\_. Some people believe that we yawn (2)\_\_\_\_\_ we do not have enough oxygen in our bodies. In (3)\_\_\_\_\_ words, we yawn to breathe in (4)\_\_\_\_\_ oxygen. People also believe that yawning is associated (5)\_\_\_\_\_ boredom.

SubQuestion No : 41

Q.41 Select the correct option to fill blank 1.

- Ans    ☐ 1. explanation  
         ☐ 2. basis  
         ☒ 3. reason  
         ☐ 4. reality

Question ID : 630680514988  
Option 1 ID : 6306802012531  
Option 2 ID : 6306802012532  
Option 3 ID : 6306802012529  
Option 4 ID : 6306802012530  
Status : Answered  
Chosen Option : 3

Comprehension:

In the following passage, some words have been deleted. Read the passage carefully and select the most appropriate option to fill in each blank.  
Why do people yawn? No one seems to know the exact (1)\_\_\_\_\_. Some people believe that we yawn (2)\_\_\_\_\_ we do not have enough oxygen in our bodies. In (3)\_\_\_\_\_ words, we yawn to breathe in (4)\_\_\_\_\_ oxygen. People also believe that yawning is associated (5)\_\_\_\_\_ boredom.

SubQuestion No : 42

Q.42 Select the correct option to fill blank 2.

- Ans    ☒ 1. when  
         ☐ 2. as  
         ☐ 3. why  
         ☐ 4. while

Question ID : 630680514989  
Option 1 ID : 6306802012535  
Option 2 ID : 6306802012533  
Option 3 ID : 6306802012536  
Option 4 ID : 6306802012534  
Status : Answered  
Chosen Option : 1

Comprehension:

In the following passage, some words have been deleted. Read the passage carefully and select the most appropriate option to fill in each blank.  
Why do people yawn? No one seems to know the exact (1)\_\_\_\_\_. Some people believe that we yawn (2)\_\_\_\_\_ we do not have enough oxygen in our bodies. In (3)\_\_\_\_\_ words, we yawn to breathe in (4)\_\_\_\_\_ oxygen. People also believe that yawning is associated (5)\_\_\_\_\_ boredom.

SubQuestion No : 43

Q.43 Select the correct option to fill blank 3.

- Ans
- ☒ 1. some
  - ☒ 2. new
  - ☒ 3. rather
  - ☒ 4. other

Question ID : 630680514990  
Option 1 ID : 6306802012540  
Option 2 ID : 6306802012538  
Option 3 ID : 6306802012537  
Option 4 ID : 6306802012539  
Status : Answered  
Chosen Option : 4

Comprehension:

In the following passage, some words have been deleted. Read the passage carefully and select the most appropriate option to fill in each blank.  
Why do people yawn? No one seems to know the exact (1)\_\_\_\_\_. Some people believe that we yawn (2)\_\_\_\_\_ we do not have enough oxygen in our bodies. In (3)\_\_\_\_\_ words, we yawn to breathe in (4)\_\_\_\_\_ oxygen. People also believe that yawning is associated (5)\_\_\_\_\_ boredom.

SubQuestion No : 44

Q.44 Select the correct option to fill blank 4.

- Ans
- ☒ 1. less
  - ☒ 2. little
  - ☒ 3. much
  - ☒ 4. more

Question ID : 630680514991  
Option 1 ID : 6306802012541  
Option 2 ID : 6306802012544  
Option 3 ID : 6306802012542  
Option 4 ID : 6306802012543  
Status : Answered  
Chosen Option : 4

Comprehension:

In the following passage, some words have been deleted. Read the passage carefully and select the most appropriate option to fill in each blank.  
Why do people yawn? No one seems to know the exact (1)\_\_\_\_\_. Some people believe that we yawn (2)\_\_\_\_\_ we do not have enough oxygen in our bodies. In (3)\_\_\_\_\_ words, we yawn to breathe in (4)\_\_\_\_\_ oxygen. People also believe that yawning is associated (5)\_\_\_\_\_ boredom.

SubQuestion No : 45

Q.45 Select the correct option to fill blank 5.

- Ans
- ☒ 1. on
  - ☒ 2. in
  - ☒ 3. with
  - ☒ 4. by

Question ID : 630680514992  
Option 1 ID : 6306802012546  
Option 2 ID : 6306802012545  
Option 3 ID : 6306802012548  
Option 4 ID : 6306802012547  
Status : Answered  
Chosen Option : 3

Comprehension:

Read the given passage and answer the questions that follow.

Ahoy there, matey! Today, we're going to talk about something near and dear to my heart: pirates. You know, those swashbuckling scallywags who pillage and plunder on the high seas. Now, when you think of pirates, you might picture them as these tough, intimidating figures. But let me tell you, there's a lot more to these buccaneers than meets the eye. For one thing, have you ever noticed that pirates seem to have an unusual fondness for parrots? I mean, come on. They're birds. What use could a pirate possibly have for a bird? And then there's the whole eyepatch thing. Yes, pirates are known for wearing eyepatches, but did you ever stop to wonder why? Some people think it's because they lost an eye in battle, but the real reason is much simpler: it's so they can switch the patch from eye to eye and maintain night vision in both eyes. Genius, right? But my favourite pirate quirk has got to be their love of treasure. I mean, who doesn't love a good treasure hunt? But the way pirates go about it is just hilarious. They'll spend months, even years, searching for that one elusive chest of gold, only to bury it on some deserted island and forget where they put it. It's like they're playing an eternal game of hide-and-seek with themselves. And let's not forget about their vocabulary. Pirates have a whole language all their own, full of terms like 'shiver me timbers', 'avast', and 'yo-ho-ho'. I mean, what does any of that even mean? It's like they're speaking a different language entirely. So, there you have it, folks. Pirates might be fierce, but they're also pretty darn funny. Who knows? Maybe we could all learn a thing or two from these salty dogs.

SubQuestion No : 46

Q.46 What is a common phrase used in pirate language?

- Ans
- ☒ 1. Yo, dude!
  - ☒ 2. Shiver me timbers
  - ☒ 3. Howdy, partner!
  - ☒ 4. Greetings, friend!

Question ID : 630680406894  
Option 1 ID : 6306801586629  
Option 2 ID : 6306801586626  
Option 3 ID : 6306801586628  
Option 4 ID : 6306801586627  
Status : Answered  
Chosen Option : 2



**Comprehension:**

Read the given passage and answer the questions that follow.

Ahoy there, matey! Today, we're going to talk about something near and dear to my heart: pirates. You know, those swashbuckling scallywags who pillage and plunder on the high seas. Now, when you think of pirates, you might picture them as these tough, intimidating figures. But let me tell you, there's a lot more to these buccaneers than meets the eye. For one thing, have you ever noticed that pirates seem to have an unusual fondness for parrots? I mean, come on. They're birds. What use could a pirate possibly have for a bird?

And then there's the whole eyepatch thing. Yes, pirates are known for wearing eyepatches, but did you ever stop to wonder why? Some people think it's because they lost an eye in battle, but the real reason is much simpler: it's so they can switch the patch from eye to eye and maintain night vision in both eyes. Genius, right?

But my favourite pirate quirk has got to be their love of treasure. I mean, who doesn't love a good treasure hunt? But the way pirates go about it is just hilarious. They'll spend months, even years, searching for that one elusive chest of gold, only to bury it on some deserted island and forget where they put it. It's like they're playing an eternal game of hide-and-seek with themselves.

And let's not forget about their vocabulary. Pirates have a whole language all their own, full of terms like 'shiver me timbers', 'avast', and 'yo-ho-ho'. I mean, what does any of that even mean? It's like they're speaking a different language entirely.

So, there you have it, folks. Pirates might be fierce, but they're also pretty darn funny. Who knows? Maybe we could all learn a thing or two from these salty dogs.

**SubQuestion No : 47**

**Q.47 Which of the following options best describes the tone of the passage?**

- Ans ☒ 1. Serious
- ☒ 2. Sarcastic
- ☒ 3. Angry
- ☒ 4. Humorous

Question ID : 630680406892  
Option 1 ID : 6306801586618  
Option 2 ID : 6306801586619  
Option 3 ID : 6306801586621  
Option 4 ID : 6306801586620  
Status : Answered  
Chosen Option : 1

**Comprehension:**

Read the given passage and answer the questions that follow.

Ahoy there, matey! Today, we're going to talk about something near and dear to my heart: pirates. You know, those swashbuckling scallywags who pillage and plunder on the high seas. Now, when you think of pirates, you might picture them as these tough, intimidating figures. But let me tell you, there's a lot more to these buccaneers than meets the eye. For one thing, have you ever noticed that pirates seem to have an unusual fondness for parrots? I mean, come on. They're birds. What use could a pirate possibly have for a bird?

And then there's the whole eyepatch thing. Yes, pirates are known for wearing eyepatches, but did you ever stop to wonder why? Some people think it's because they lost an eye in battle, but the real reason is much simpler: it's so they can switch the patch from eye to eye and maintain night vision in both eyes. Genius, right?

But my favourite pirate quirk has got to be their love of treasure. I mean, who doesn't love a good treasure hunt? But the way pirates go about it is just hilarious. They'll spend months, even years, searching for that one elusive chest of gold, only to bury it on some deserted island and forget where they put it. It's like they're playing an eternal game of hide-and-seek with themselves.

And let's not forget about their vocabulary. Pirates have a whole language all their own, full of terms like 'shiver me timbers', 'avast', and 'yo-ho-ho'. I mean, what does any of that even mean? It's like they're speaking a different language entirely.

So, there you have it, folks. Pirates might be fierce, but they're also pretty darn funny. Who knows? Maybe we could all learn a thing or two from these salty dogs.

**SubQuestion No : 48**

**Q.48 What is one of the pirate quirks mentioned in the passage?**

- Ans**    ☒ 1. Their tendency to forget where they buried their treasure
- ☐ 2. Their love for basketball
- ☐ 3. Their fondness for cats
- ☐ 4. Their love of gardening

Question ID : 630680406893  
Option 1 ID : 6306801586624  
Option 2 ID : 6306801586622  
Option 3 ID : 6306801586623  
Option 4 ID : 6306801586625  
Status : Answered  
Chosen Option : 1

**Comprehension:**

Read the given passage and answer the questions that follow.

Ahoy there, matey! Today, we're going to talk about something near and dear to my heart: pirates. You know, those swashbuckling scallywags who pillage and plunder on the high seas. Now, when you think of pirates, you might picture them as these tough, intimidating figures. But let me tell you, there's a lot more to these buccaneers than meets the eye. For one thing, have you ever noticed that pirates seem to have an unusual fondness for parrots? I mean, come on. They're birds. What use could a pirate possibly have for a bird?

And then there's the whole eyepatch thing. Yes, pirates are known for wearing eyepatches, but did you ever stop to wonder why? Some people think it's because they lost an eye in battle, but the real reason is much simpler: it's so they can switch the patch from eye to eye and maintain night vision in both eyes. Genius, right?

But my favourite pirate quirk has got to be their love of treasure. I mean, who doesn't love a good treasure hunt? But the way pirates go about it is just hilarious. They'll spend months, even years, searching for that one elusive chest of gold, only to bury it on some deserted island and forget where they put it. It's like they're playing an eternal game of hide-and-seek with themselves.

And let's not forget about their vocabulary. Pirates have a whole language all their own, full of terms like 'shiver me timbers', 'avast', and 'yo-ho-ho'. I mean, what does any of that even mean? It's like they're speaking a different language entirely.

So, there you have it, folks. Pirates might be fierce, but they're also pretty darn funny. Who knows? Maybe we could all learn a thing or two from these salty dogs.

**SubQuestion No : 49**

**Q.49 Which of the following would be the most appropriate title for this passage?**

- Ans ☒ 1. The Mysterious Language of Pirates
- ☒ 2. The Serious World of Pirates
- ☒ 3. The Humorous Quirks of Pirates
- ☒ 4. The Fierce and Intimidating Pirate Culture

Question ID : 630680406895  
Option 1 ID : 6306801586632  
Option 2 ID : 6306801586630  
Option 3 ID : 6306801586633  
Option 4 ID : 6306801586631  
Status : Answered  
Chosen Option : 1

**Comprehension:**

Read the given passage and answer the questions that follow.

Ahoy there, matey! Today, we're going to talk about something near and dear to my heart: pirates. You know, those swashbuckling scallywags who pillage and plunder on the high seas. Now, when you think of pirates, you might picture them as these tough, intimidating figures. But let me tell you, there's a lot more to these buccaneers than meets the eye. For one thing, have you ever noticed that pirates seem to have an unusual fondness for parrots? I mean, come on. They're birds. What use could a pirate possibly have for a bird?

And then there's the whole eyepatch thing. Yes, pirates are known for wearing eyepatches, but did you ever stop to wonder why? Some people think it's because they lost an eye in battle, but the real reason is much simpler: it's so they can switch the patch from eye to eye and maintain night vision in both eyes. Genius, right?

But my favourite pirate quirk has got to be their love of treasure. I mean, who doesn't love a good treasure hunt? But the way pirates go about it is just hilarious. They'll spend months, even years, searching for that one elusive chest of gold, only to bury it on some deserted island and forget where they put it. It's like they're playing an eternal game of hide-and-seek with themselves.

And let's not forget about their vocabulary. Pirates have a whole language all their own, full of terms like 'shiver me timbers', 'avast', and 'yo-ho-ho'. I mean, what does any of that even mean? It's like they're speaking a different language entirely.

So, there you have it, folks. Pirates might be fierce, but they're also pretty darn funny. Who knows? Maybe we could all learn a thing or two from these salty dogs.

**SubQuestion No : 50**

**Q.50 Why do pirates wear eyepatches?**

- Ans**    ☒ 1. To maintain night vision in both eyes
- ☐ 2. To cover up an embarrassing birthmark
- ☐ 3. Because they lost an eye in battle
- ☐ 4. To intimidate their enemies

Question ID : 630680406891  
Option 1 ID : 6306801586615  
Option 2 ID : 6306801586617  
Option 3 ID : 6306801586616  
Option 4 ID : 6306801586614  
Status : Answered  
Chosen Option : 1