

Sub Inspector in Delhi Police and Central Armed Police Forces Examination 2024 Paper I  
Exam

Roll Number	
Candidate Name	
Venue Name	
Exam Date	29/06/2024
Exam Time	9:00 AM - 11:00 AM
Subject	SICPO Paper I 2024

Section : General Intelligence and Reasoning

Q.1 If + means  $\times$  ,  $\times$  means  $\div$  ,  $\div$  means + , what will come in place of the question mark (?) in the given equation?

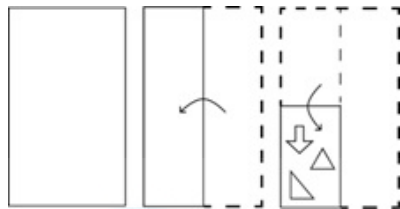
$1200 \times 3 - 1 \div 100 + 499 = ?$

- Ans
- ☒ 1. 5
  - ☒ 2. 3
  - ☒ 3. 2
  - ☒ 4. 1

Question ID : 630680154562  
Option 1 ID : 630680598053  
Option 2 ID : 630680598054  
Option 3 ID : 630680598055  
Option 4 ID : 630680598052

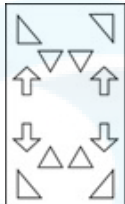
Status : Answered  
Chosen Option : 4

Q.2 The sequence of folding a paper and the manner in which the folded paper is cut is shown in the following figures. How would this paper look when unfolded?

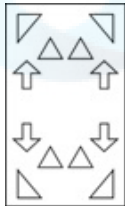


Ans

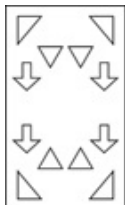
✗ 1.



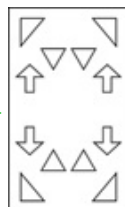
✗ 2.



✗ 3.



✓ 4.



Question ID : 630680344224

Option 1 ID : 6306801339209

Option 2 ID : 6306801339210

Option 3 ID : 6306801339212

Option 4 ID : 6306801339211

Status : Answered

Chosen Option : 2

Q.3 Select the option figure in which the given figure is embedded as its part (rotation is NOT allowed).



Ans

✓ 1.



✗ 2.



✗ 3.



✗ 4.



Question ID : 630680867779  
Option 1 ID : 6306803398763  
Option 2 ID : 6306803398761  
Option 3 ID : 6306803398760  
Option 4 ID : 6306803398762  
Status : Answered  
Chosen Option : 1

Q.4 Two statements are given, followed by two conclusions numbered I and II. Assuming the statements to be true, even if they seem to be at variance with commonly known facts, decide which of the conclusions logically follow(s) from the statements.

Statements:  
All papers are trees.  
Some papers are leaves.  
Conclusions:  
I. Some trees are leaves.  
II. Some trees are papers.

Ans

- ✗ 1. Only conclusion I follows  
✓ 2. Both conclusions I and II follow  
✗ 3. Neither conclusion I nor II follows  
✗ 4. Only conclusion II follows

Question ID : 630680417362  
Option 1 ID : 6306801628211  
Option 2 ID : 6306801628213  
Option 3 ID : 6306801628214  
Option 4 ID : 6306801628212  
Status : Answered  
Chosen Option : 2

Q.5 Six students are sitting around a circular table facing the centre. Van is sitting second to the left of Luke. Luke is an immediate neighbour of both Ruth and Max. Jude is sitting second to the left of Van. Ruth is an immediate neighbour of both Luke and Van. Who is the immediate neighbour of Jude and Luke?

- Ans
- ☒ 1. Ruth
  - ☒ 2. Tess
  - ☒ 3. Max
  - ☒ 4. Van

Question ID : 630680417150  
Option 1 ID : 6306801627366  
Option 2 ID : 6306801627365  
Option 3 ID : 6306801627363  
Option 4 ID : 6306801627364  
Status : Answered  
Chosen Option : 2

Q.6 Select the set in which the numbers are related in the same way as are the numbers of the following sets.

(NOTE: Operations should be performed on the whole numbers, without breaking down the numbers into its constituent digits. E.g. 13 – Operations on 13 such as adding /deleting /multiplying etc. to 13 can be performed. Breaking down 13 into 1 and 3 and then performing mathematical operations on 1 and 3 is not allowed)

(104, 26, 13)  
(168, 42, 21)

- Ans
- ☒ 1. (216, 54, 27)
  - ☒ 2. (216, 52, 27)
  - ☒ 3. (210, 54, 27)
  - ☒ 4. (216, 54, 29)

Question ID : 630680344675  
Option 1 ID : 6306801341011  
Option 2 ID : 6306801341009  
Option 3 ID : 6306801341010  
Option 4 ID : 6306801341012  
Status : Answered  
Chosen Option : 1

Q.7 Select the set in which the numbers are related in the same way as are the numbers of the following sets.

(NOTE : Operations should be performed on the whole numbers, without breaking down the numbers into its constituent digits. E.g. 13 – Operations on 13 such as adding /deleting /multiplying etc. to 13 can be performed. Breaking down 13 into 1 and 3 and then performing mathematical operations on 1 and 3 is not allowed.)

(145, 76)  
(182, 113)

- Ans
- ☒ 1. (163, 94)
  - ☒ 2. (153, 74)
  - ☒ 3. (149, 72)
  - ☒ 4. (174, 112)

Question ID : 630680340899  
Option 1 ID : 6306801326040  
Option 2 ID : 6306801326039  
Option 3 ID : 6306801326037  
Option 4 ID : 6306801326038  
Status : Answered  
Chosen Option : 1

Q.8 Harini starts from a cafe and walks 4 km towards the south. She then turns right and walks 2 km, again turns right and walks 4 km, and then turns left and walks 4 km. How many kilometres will Harini need to walk to reach the café straight from this point?

- Ans ☒ 1. 8 km  
☒ 2. 6 km  
☒ 3. 4 km  
☒ 4. 2 km

Question ID : 630680147601  
Option 1 ID : 630680571145  
Option 2 ID : 630680571143  
Option 3 ID : 630680571142  
Option 4 ID : 630680571144  
Status : Answered  
Chosen Option : 2

Q.9 Select the set in which the numbers are related in the same way as are the numbers of the following sets.

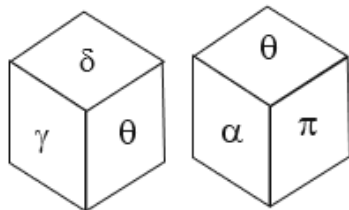
(NOTE: Operations should be performed on the whole numbers, without breaking down the numbers into its constituent digits. E.g. 13 – Operations on 13 such as adding /deleting /multiplying etc. to 13 can be performed. Breaking down 13 into 1 and 3 and then performing mathematical operations on 1 and 3 is not allowed)

(15, 60, 10)  
(21, 84, 14)

- Ans ☒ 1. (31, 132, 22)  
☒ 2. (33, 132, 24)  
☒ 3. (33, 134, 22)  
☒ 4. (33, 132, 22)

Question ID : 630680344671  
Option 1 ID : 6306801340995  
Option 2 ID : 6306801340993  
Option 3 ID : 6306801340994  
Option 4 ID : 6306801340996  
Status : Answered  
Chosen Option : 4

Q.10 A dice has its faces marked by symbols  $\alpha$ ,  $\beta$ ,  $\theta$ ,  $\gamma$ ,  $\pi$  and  $\delta$ . Two positions of the same dice are given below. Which face is opposite to face  $\beta$ ?



- Ans ☒ 1.  $\alpha$   
☒ 2.  $\delta$   
☒ 3.  $\theta$   
☒ 4.  $\gamma$

Question ID : 630680867784  
Option 1 ID : 6306803398781  
Option 2 ID : 6306803398783  
Option 3 ID : 6306803398780  
Option 4 ID : 6306803398782  
Status : Answered  
Chosen Option : 3

Q.11 If '+' means '-', '-' means 'x', 'x' means '÷' and '÷' means '+', what will come in place of '?' in the following equation?  
 $59 \div 6 - 28 \times 7 + 30 = ?$

Ans ☒ 1. 49

☒ 2. 53

☒ 3. 67

☒ 4. 58

Question ID : 630680411990

Option 1 ID : 6306801606796

Option 2 ID : 6306801606798

Option 3 ID : 6306801606797

Option 4 ID : 6306801606795

Status : Answered

Chosen Option : 2

Q.12 If 'A' stands for '+', 'B' stands for '-', 'C' stands for 'x' and 'D' stands for '÷', what will come in place of the question mark (?) in the following equation?  
 $69 \text{ D } 3 \text{ A } 4 \text{ C } 7 \text{ B } 10 = ?$

Ans ☒ 1. 39

☒ 2. 41

☒ 3. 37

☒ 4. 35

Question ID : 630680411667

Option 1 ID : 6306801605505

Option 2 ID : 6306801605506

Option 3 ID : 6306801605503

Option 4 ID : 6306801605504

Status : Answered

Chosen Option : 2

Q.13 Select the option that is related to the third word in the same way as the second word is related to the first word.

(The words must be considered as meaningful English words and must not be related to each other based on the number of letters/number of consonants/ vowels in the word.)

Ounce : Kilogram :: Quart : ?

Ans ☒ 1. Ounces

☒ 2. Liquid

☒ 3. Stone

☒ 4. Litres

Question ID : 630680416417

Option 1 ID : 6306801624432

Option 2 ID : 6306801624431

Option 3 ID : 6306801624434

Option 4 ID : 6306801624433

Status : Answered

Chosen Option : 4

Q.14 In a certain code language, 'BELT' is written as '78', and 'CASH' is written as '62'. How will 'DISC' be written in that language?

- Ans
- ☒ 1. 86
  - ☒ 2. 82
  - ☒ 3. 70
  - ☒ 4. 92

Question ID : 630680416612  
Option 1 ID : 6306801625213  
Option 2 ID : 6306801625212  
Option 3 ID : 6306801625211  
Option 4 ID : 6306801625214  
Status : Answered  
Chosen Option : 3

Q.15 Which letter cluster will replace the question mark (?) to complete the given series?  
PFBR, MKUA, ?, GUGS, DZZB

- Ans
- ☒ 1. HKPE
  - ☒ 2. JPNJ
  - ☒ 3. JLEJ
  - ☒ 4. QYGC

Question ID : 630680417192  
Option 1 ID : 6306801627534  
Option 2 ID : 6306801627532  
Option 3 ID : 6306801627531  
Option 4 ID : 6306801627533  
Status : Answered  
Chosen Option : 2

Q.16 Select the figure from among the given options that can logically replace the question mark (?) in the following series.

tf	i	!!	t	f	tf	i	!!	?
t			tf	!!	f	t		
!!	f	f	i	i	t	tf		

Ans

✗ 1.

tf		f
	i	
t		!!

✗ 2.

!!		tf
	t	
i		f

✓ 3.

t		f
	i	
tf		!!

✗ 4.

t		!!
	tf	
i		f

Question ID : 630680867762

Option 1 ID : 6306803398694

Option 2 ID : 6306803398692

Option 3 ID : 6306803398695

Option 4 ID : 6306803398693

Status : Answered

Chosen Option : 3



Q.17 Identify the figure given in the options which when put in place of (?) will logically complete the series.

P	A	T	P	S	T	O	S	
	S			O	A		P	?
T		O	S	A	O	P	A	T

Ans

✓ 1.

A		O
	T	
P		S

✗ 2.

P		A
	S	
T		O

✗ 3.

A		O
	T	
S		P

✗ 4.

A		T
	S	
O		P

Question ID : 630680867768

Option 1 ID : 6306803398717

Option 2 ID : 6306803398718

Option 3 ID : 6306803398716

Option 4 ID : 6306803398719

Status : Answered

Chosen Option : 1

Q.18 Which of the following terms will replace the question mark (?) in the given series?  
MLV, NMW, ONX, ?

Ans ✗ 1. FJM

✗ 2. EFG

✓ 3. POY

✗ 4. GNM

Question ID : 630680417063

Option 1 ID : 6306801627017

Option 2 ID : 6306801627015

Option 3 ID : 6306801627016

Option 4 ID : 6306801627018

Status : Answered

Chosen Option : 3

Q.19 Two statements are given followed by two conclusions numbered I and II. Assuming the statements to be true, even if they seem to be at variance with commonly known facts, decide which of the conclusions logically follow(s) from the statements.

Statements:

1) All networks are fibers.

2) Some fibers are wires.

Conclusions:

I. All networks can never be wires.

II. Some networks are wires.

Ans ☒ 1. Neither Conclusion I nor II follows.

☐ 2. Both Conclusions I and II follow.

☐ 3. Only Conclusion I follows.

☐ 4. Only Conclusion II follows.

Question ID : 630680416928

Option 1 ID : 6306801626477

Option 2 ID : 6306801626478

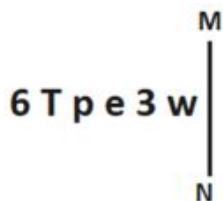
Option 3 ID : 6306801626475

Option 4 ID : 6306801626476

Status : Answered

Chosen Option : 1

Q.20 Select the correct mirror image of the given figure when the mirror is placed at MN as shown below.



Ans ☐ 1. w e 3 q T ð

☐ 2. M E e q T ð

☐ 3. w E e d 1 9

☒ 4. w E e q T ð

Question ID : 630680356645

Option 1 ID : 6306801388584

Option 2 ID : 6306801388582

Option 3 ID : 6306801388581

Option 4 ID : 6306801388583

Status : Answered

Chosen Option : 4

Q.21 If 'A' stands for '+', 'B' stands for '×', 'C' stands for '+' and 'D' stands for '−', what will come in place of the question mark (?) in the following equation?  
228 B 5 C 89 D 328 A 4 = ?

Ans ☐ 1. 1774

☐ 2. 1174

☒ 3. 1147

☐ 4. 1474

Question ID : 630680411709

Option 1 ID : 6306801605673

Option 2 ID : 6306801605672

Option 3 ID : 6306801605671

Option 4 ID : 6306801605674

Status : Answered

Chosen Option : 3

Q.22 Select the option that is related to the third word in the same way as the second word is related to the first word. (The words must be considered as meaningful English words and must not be related to each other based on the number of letters/number of consonants/vowels in the word.)  
Swan : Cygnet :: Dog : ?

- Ans ☒ 1. Puppy  
☒ 2. Calf  
☒ 3. Pet  
☒ 4. Omnivores

Question ID : 630680416727  
Option 1 ID : 6306801625672  
Option 2 ID : 6306801625674  
Option 3 ID : 6306801625673  
Option 4 ID : 6306801625671  
Status : Answered  
Chosen Option : 1

Q.23 If '+' means '-', '-' means 'x', 'x' means '÷', '÷' means '+', what will come in place of the question mark (?) in the following equation?

$42 \times 3 - 16 \div 9 + 11 = ?$

- Ans ☒ 1. 232  
☒ 2. 227  
☒ 3. 222  
☒ 4. 240

Question ID : 630680158166  
Option 1 ID : 630680612193  
Option 2 ID : 630680612192  
Option 3 ID : 630680612195  
Option 4 ID : 630680612194  
Status : Answered  
Chosen Option : 3

Q.24 Select the option that represents the correct order of the given words as they would appear in an English dictionary.

1. Winterish
2. Wingspread
3. Windblast
4. Wintertide
5. Windscreen
6. Winkling

- Ans ☒ 1. 3, 5, 2, 6, 1, 4  
☒ 2. 3, 5, 4, 2, 6, 1  
☒ 3. 3, 5, 2, 4, 6, 1  
☒ 4. 3, 5, 2, 4, 1, 6

Question ID : 630680417408  
Option 1 ID : 6306801628397  
Option 2 ID : 6306801628395  
Option 3 ID : 6306801628396  
Option 4 ID : 6306801628398  
Status : Answered  
Chosen Option : 1

Q.25 In a code language, 'ROCK' is written as 'PKAG', and 'CLUB' is written as 'AHSX'. How will 'SHOP' be written in that language?

- Ans
- ☒ 1. MQDL
  - ☒ 2. QMLD
  - ☒ 3. QDML
  - ☒ 4. QMDL

Question ID : 630680416685  
Option 1 ID : 6306801625505  
Option 2 ID : 6306801625503  
Option 3 ID : 6306801625504  
Option 4 ID : 6306801625506  
Status : Answered  
Chosen Option : 3

Q.26 In a certain code language, 'COOL' is written as '45' and 'TREE' is written as '48'. How will 'WELL' be written in that language?

- Ans
- ☒ 1. 46
  - ☒ 2. 52
  - ☒ 3. 36
  - ☒ 4. 51

Question ID : 630680416593  
Option 1 ID : 6306801625137  
Option 2 ID : 6306801625135  
Option 3 ID : 6306801625136  
Option 4 ID : 6306801625138  
Status : Answered  
Chosen Option : 2

Q.27 Select the option that indicates the correct arrangement of the given words in the order in which they appear in an English dictionary.

- 1- Circle
- 2- Cinema
- 3- Circus
- 4- Circumference
- 5- Cipher

- Ans
- ☒ 1. 2, 5, 1, 4, 3
  - ☒ 2. 2, 1, 5, 4, 3
  - ☒ 3. 5, 2, 4, 1, 3
  - ☒ 4. 5, 4, 3, 1, 2

Question ID : 630680417216  
Option 1 ID : 6306801627628  
Option 2 ID : 6306801627630  
Option 3 ID : 6306801627627  
Option 4 ID : 6306801627629  
Status : Answered  
Chosen Option : 1

Q.28 Rajesh starts from Point A and drives 17 km towards West. He then takes a left turn, drives 10 km, turns left and drives 40 km. He then takes a left turn and drives 30 km. He takes a final left turn, drives 23 km and stops at Point Q. How far (shortest distance) and towards which direction should he now drive to reach Point A again? (All turns are 90° turns only.)

Ans ☒ 1. 20 km towards South

☐ 2. 20 km towards North

☐ 3. 15 km towards North

☐ 4. 15 km towards South

Question ID : 630680416080

Option 1 ID : 6306801623084

Option 2 ID : 6306801623083

Option 3 ID : 6306801623085

Option 4 ID : 6306801623086

Status : Answered

Chosen Option : 2

Q.29 Two statements are given, followed by two conclusions numbered I and II. Assuming the statements to be true, even if they seem to be at variance with commonly known facts, decide which of the conclusions logically follow(s) from the statements.

Statements:

Some clothes are sarees.

All sarees are silks.

Conclusions:

I. Some clothes are silks.

II. Some silks are sarees.

Ans ☐ 1. Only conclusion II follows

☐ 2. Only conclusion I follows

☐ 3. Neither conclusion I nor II follows

☒ 4. Both conclusions I and II follow

Question ID : 630680417364

Option 1 ID : 6306801628220

Option 2 ID : 6306801628219

Option 3 ID : 6306801628222

Option 4 ID : 6306801628221

Status : Answered

Chosen Option : 4

Q.30 254 is related to 524 following a certain logic. Following the same logic, 912 is related to 642. Which of the following numbers is related to 188 using the same logic?

Ans ☐ 1. 900

☒ 2. 845

☐ 3. 825

☐ 4. 840

Question ID : 63068063341

Option 1 ID : 630680244530

Option 2 ID : 630680244532

Option 3 ID : 630680244533

Option 4 ID : 630680244531

Status : Answered

Chosen Option : 2

Q.31 In a certain code language,  
'A @ B' means 'A is the daughter of B',  
'A # B' means 'A is the brother of B',  
'A + B' means 'A is the wife of B',  
'A % B' means 'A is the father of B'.  
How is M related to T if 'M # N @ P + S % T'?

- Ans    ☒ 1. Brother  
         ☐ 2. Husband  
         ☐ 3. Mother's brother  
         ☐ 4. Father

Question ID : 630680869740  
Option 1 ID : 6306803406327  
Option 2 ID : 6306803406328  
Option 3 ID : 6306803406329  
Option 4 ID : 6306803406326  
Status : Answered  
Chosen Option : 1

Q.32 Select the pair which is related to each other in the same way as the following –  
72:25

- Ans    ☐ 1. 68:8  
         ☐ 2. 54:30  
         ☒ 3. 28:36  
         ☐ 4. 46:14

Question ID : 630680110733  
Option 1 ID : 630680429009  
Option 2 ID : 630680429012  
Option 3 ID : 630680429010  
Option 4 ID : 630680429011  
Status : Answered  
Chosen Option : 3

Q.33 In a certain code language,  
'A + B' means 'A is the mother of B';  
'A - B' means 'A is the husband of B';  
'A × B' means 'B is the sister of A' and  
'A ÷ B' means 'A is the father of B'.  
Based on the above information, how is R related to T if 'R ÷ S - V + Q × T'?

- Ans    ☐ 1. Father  
         ☒ 2. Father's father  
         ☐ 3. Brother  
         ☐ 4. Son

Question ID : 630680287540  
Option 1 ID : 6306801118067  
Option 2 ID : 6306801118070  
Option 3 ID : 6306801118068  
Option 4 ID : 6306801118069  
Status : Answered  
Chosen Option : 2

Q.34 Which of the following numbers will replace the question mark (?) in the given series?  
67, 78, 103, 118, ?

- Ans ☒ 1. 171  
☒ 2. 184  
☒ 3. 147  
☒ 4. 241

Question ID : 630680412017  
Option 1 ID : 6306801606904  
Option 2 ID : 6306801606903  
Option 3 ID : 6306801606906  
Option 4 ID : 6306801606905  
Status : Answered  
Chosen Option : 3

Q.35 Find the two signs to be interchanged for making the following equation correct.  
 $9 + 8 \times 4 - 8 \div 2 = 11$

- Ans ☒ 1. + and +  
☒ 2. + and ×  
☒ 3. - and +  
☒ 4. ÷ and -

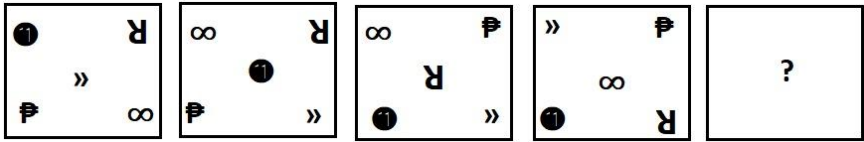
Question ID : 630680411795  
Option 1 ID : 6306801606017  
Option 2 ID : 6306801606018  
Option 3 ID : 6306801606016  
Option 4 ID : 6306801606015  
Status : Answered  
Chosen Option : 4

Q.36 Which letter cluster can replace the question mark (?) to complete the given series?  
TCVH, RETJ, ?, NIPN, LKNP

- Ans ☒ 1. MGSK  
☒ 2. MFSK  
☒ 3. PGRL  
☒ 4. PFRL

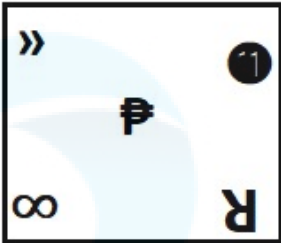
Question ID : 630680416306  
Option 1 ID : 6306801623989  
Option 2 ID : 6306801623987  
Option 3 ID : 6306801623990  
Option 4 ID : 6306801623988  
Status : Answered  
Chosen Option : 3

Q.37 Select the figure from among the given options that can logically replace the question mark (?) in the following series.

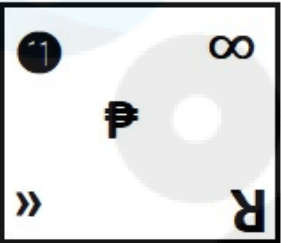


Ans

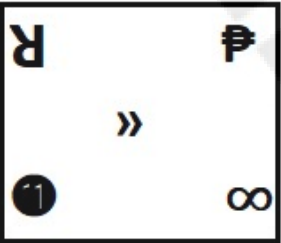
✓ 1.



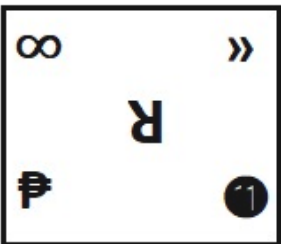
✗ 2.



✗ 3.



✗ 4.



Question ID : 630680867752

Option 1 ID : 6306803398655

Option 2 ID : 6306803398654

Option 3 ID : 6306803398652

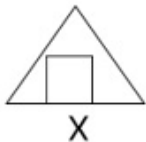
Option 4 ID : 6306803398653

Status : Answered

Chosen Option : 1



Q.38 Select the option in which the given figure (X) is embedded as its part. (Rotation is NOT allowed.)



Ans

✗ 1.



✓ 2.



✗ 3.



✗ 4.



Question ID : 630680305494

Option 1 ID : 6306801188355

Option 2 ID : 6306801188354

Option 3 ID : 6306801188356

Option 4 ID : 6306801188353

Status : Answered

Chosen Option : 2

Q.39 Which of the following numbers will replace the question mark (?) in the given series?  
43, 48, 46, ?, 49, 54, 52

Ans ✗ 1. 52

✓ 2. 51

✗ 3. 50

✗ 4. 47

Question ID : 630680411952

Option 1 ID : 6306801606645

Option 2 ID : 6306801606643

Option 3 ID : 6306801606646

Option 4 ID : 6306801606644

Status : Answered

Chosen Option : 2

Q.40 In a code language, 'DILIP' is coded as 46-36-30-36-22 and 'PRINCE' is coded as 22-18-36-26-48-44. How will 'FIROZ' be coded in the same language?

- Ans ☒ 1. 42-36-18-24-2  
☒ 2. 2-36-18-42-52  
☒ 3. 56-36-18-32-52  
☒ 4. 48-36-18-38-6

Question ID : 630680416663  
Option 1 ID : 6306801625415  
Option 2 ID : 6306801625417  
Option 3 ID : 6306801625416  
Option 4 ID : 6306801625418  
Status : Answered  
Chosen Option : 1

Q.41 If + means  $\times$ ,  $\times$  means  $\div$ ,  $\div$  means  $+$ , what will come in place of the question mark (?) in the given equation.

$$300 - 12 \times 120 \div 9 + 32 = ?$$

- Ans ☒ 1. 7  
☒ 2. 5  
☒ 3. 12  
☒ 4. 10

Question ID : 630680155122  
Option 1 ID : 630680600241  
Option 2 ID : 630680600240  
Option 3 ID : 630680600243  
Option 4 ID : 630680600242  
Status : Answered  
Chosen Option : 1

Q.42 Which of the following numbers will replace the question marks (?) in the given series?  
2, 6, 12, 20, ?, ?, 56, 72

- Ans ☒ 1. 36, 40  
☒ 2. 30, 38  
☒ 3. 30, 42  
☒ 4. 32, 44

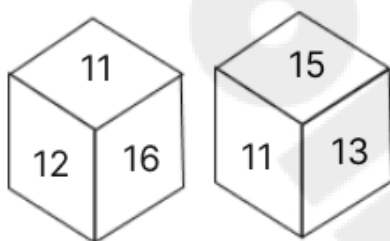
Question ID : 630680411875  
Option 1 ID : 6306801606338  
Option 2 ID : 6306801606337  
Option 3 ID : 6306801606335  
Option 4 ID : 6306801606336  
Status : Answered  
Chosen Option : 3

Q.43 Select the number from among the given options that can replace the question mark (?) in the following series.  
1024, 899, 835, 808, 800, ?

- Ans ☐ 1. 795  
☐ 2. 798  
☐ 3. 797  
☒ 4. 799

Question ID : 630680411929  
Option 1 ID : 6306801606553  
Option 2 ID : 6306801606552  
Option 3 ID : 6306801606551  
Option 4 ID : 6306801606554  
Status : Answered  
Chosen Option : 4

Q.44 A dice has its faces marked by numbers 11, 12, 13, 14, 15 and 16. Two positions of the same dice are given below. Which face is opposite to face 14?



- Ans ☐ 1. 12  
☐ 2. 15  
☐ 3. 16  
☒ 4. 11

Question ID : 630680867787  
Option 1 ID : 6306803398793  
Option 2 ID : 6306803398794  
Option 3 ID : 6306803398795  
Option 4 ID : 6306803398792  
Status : Answered  
Chosen Option : 4

Q.45 Two statements are given, followed by two conclusions numbered I and II. Assuming the statements to be true, even if they seem to be at variance with commonly known facts, decide which of the conclusions logically follow(s) from the statements.

Statements:

All notebooks are erasers.

All erasers are pens.

Conclusions:

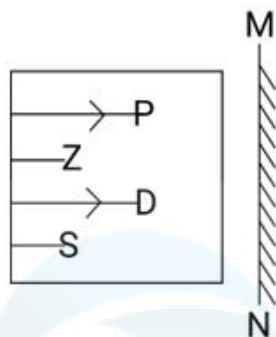
I.All notebooks are pens.

II.Some pens are notebooks.

- Ans ☐ 1. Neither conclusion I nor II follows  
☐ 2. Only conclusion I follows  
☐ 3. Only conclusion II follows  
☒ 4. Both conclusions I and II follow

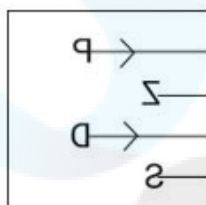
Question ID : 630680417007  
Option 1 ID : 6306801626794  
Option 2 ID : 6306801626791  
Option 3 ID : 6306801626792  
Option 4 ID : 6306801626793  
Status : Answered  
Chosen Option : 4

Q.46 Select the correct mirror image of the given figure when the mirror is placed at MN as shown below.

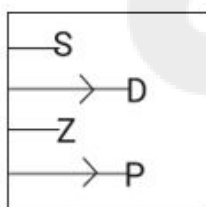


Ans

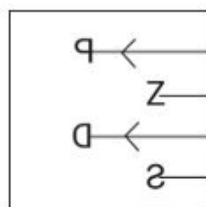
✗ 1.



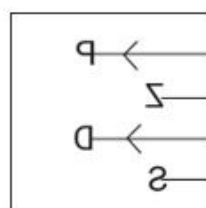
✗ 2.



✗ 3.



✓ 4.



Question ID : 630680318348

Option 1 ID : 6306801238471

Option 2 ID : 6306801238469

Option 3 ID : 6306801238472

Option 4 ID : 6306801238470

Status : Answered

Chosen Option : 4

Q.47 In a certain code language, 'revise the lesson' is written as 'rx cd st' and 'the lesson plan' is written as 'cd nq rx'. How is 'revise' written in the given language?

- Ans ☒ 1. st  
☒ 2. cd  
☒ 3. rx  
☒ 4. nq

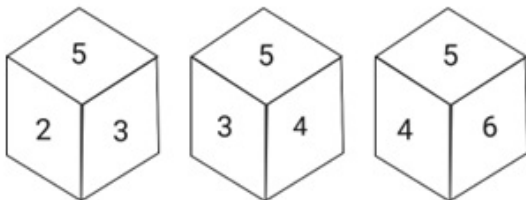
Question ID : 630680305479  
Option 1 ID : 6306801188294  
Option 2 ID : 6306801188296  
Option 3 ID : 6306801188293  
Option 4 ID : 6306801188295  
Status : Answered  
Chosen Option : 1

Q.48 In a certain code language, 'print the cards' is written as 'cd fm px' and 'cards for sale' is written as 'nt px ym'. How is 'cards' written in the given language?

- Ans ☒ 1. px  
☒ 2. cd  
☒ 3. nt  
☒ 4. fm

Question ID : 630680305478  
Option 1 ID : 6306801188289  
Option 2 ID : 6306801188292  
Option 3 ID : 6306801188291  
Option 4 ID : 6306801188290  
Status : Answered  
Chosen Option : 1

Q.49 Three different positions of the same die are shown below. What is the number on the face opposite to the one having 6?



- Ans ☒ 1. 1  
☒ 2. 4  
☒ 3. 3  
☒ 4. 5

Question ID : 630680312619  
Option 1 ID : 6306801216360  
Option 2 ID : 6306801216358  
Option 3 ID : 6306801216357  
Option 4 ID : 6306801216359  
Status : Answered  
Chosen Option : 3

**Q.50** Based on the English alphabetical order, three of the following four letter-clusters are alike in a certain way and thus form a group. Which letter-cluster does not belong to that group?  
(Note: The odd letter-cluster is not based on the number of consonants/vowels or their position in the letter-cluster.)

- Ans
- ☒ 1. PUR
  - ☒ 2. RWT
  - ☒ 3. NSP
  - ☒ 4. TYU

Question ID : 630680416092  
Option 1 ID : 6306801623132  
Option 2 ID : 6306801623133  
Option 3 ID : 6306801623131  
Option 4 ID : 6306801623134  
Status : Answered  
Chosen Option : 4

Section : General Knowledge and General Awareness

**Q.1** Identify the reason for formation of dental plaque.

- Ans
- ☒ 1. When acids stick to the teeth
  - ☒ 2. Masses of bacterial cells together with food particles stick to the teeth
  - ☒ 3. Saliva sticks to the pulp
  - ☒ 4. When bacteria acting on sugars produce acids

Question ID : 630680407490  
Option 1 ID : 6306801588898  
Option 2 ID : 6306801588900  
Option 3 ID : 6306801588901  
Option 4 ID : 6306801588899  
Status : Answered  
Chosen Option : 4

**Q.2** Which of the following books is written by Rabindranath Tagore?

- Ans
- ☒ 1. The Essential Writings
  - ☒ 2. The Way to God
  - ☒ 3. Nationalism
  - ☒ 4. Non-Violent Resistance

Question ID : 630680701385  
Option 1 ID : 6306802747480  
Option 2 ID : 6306802747479  
Option 3 ID : 6306802747478  
Option 4 ID : 6306802747477  
Status : Not Answered  
Chosen Option : --

Q.3 Indian musician, composer and singer Shubha Mudgal was awarded with the \_\_\_\_\_ in 2000.

- Ans
- ☒ 1. Padma Bhushan
  - ☒ 2. Padma Vibhushan
  - ☒ 3. Sangeet Natak Akademi
  - ☒ 4. Padma Shri

Question ID : 630680415810  
Option 1 ID : 6306801622008  
Option 2 ID : 6306801622007  
Option 3 ID : 6306801622010  
Option 4 ID : 6306801622009  
Status : Not Answered  
Chosen Option : --

Q.4 Which of the following statements about privatisation is FALSE?

- Ans
- ☒ 1. Improved performance is one of the advantages of privatisation.
  - ☒ 2. There is no possibility of exploitation of monopoly power by private companies after privatisation.
  - ☒ 3. There was an increase in the cases of disinvestment after the economic reforms of 1991 as compared to the pre-1991 period.
  - ☒ 4. Maruti Udyog Limited was a public sector enterprise before the 1991 economic reforms.

Question ID : 630680407174  
Option 1 ID : 6306801587639  
Option 2 ID : 6306801587638  
Option 3 ID : 6306801587640  
Option 4 ID : 6306801587641  
Status : Answered  
Chosen Option : 2

Q.5 As of 2022, according to the Ministry of Petroleum and Natural Gas of the Government of India, how many oil refineries are there in India in total?

- Ans
- ☒ 1. 35
  - ☒ 2. 23
  - ☒ 3. 21
  - ☒ 4. 15

Question ID : 630680409690  
Option 1 ID : 6306801597590  
Option 2 ID : 6306801597592  
Option 3 ID : 6306801597589  
Option 4 ID : 6306801597591  
Status : Not Answered  
Chosen Option : --

Q.6 Which of the following physiographic divisions of India has extensive alluvial soil ?

- Ans ☒ 1. The Himalayan Range
- ☒ 2. The North Indian Plain
- ☒ 3. The Island Group
- ☒ 4. The Great Indian Desert

Question ID : 630680701448  
Option 1 ID : 6306802747727  
Option 2 ID : 6306802747726  
Option 3 ID : 6306802747728  
Option 4 ID : 6306802747725  
Status : Answered  
Chosen Option : 2

Q.7 What is the shape of the eyeball?

- Ans ☒ 1. Spherical
- ☒ 2. Oval
- ☒ 3. Cylindrical
- ☒ 4. Circular

Question ID : 63068074762  
Option 1 ID : 630680289205  
Option 2 ID : 630680289206  
Option 3 ID : 630680289204  
Option 4 ID : 630680289203  
Status : Answered  
Chosen Option : 2

Q.8 Pipelines as a means of transport are looked after by the \_\_\_\_\_ of the Government of India.

- Ans ☒ 1. Ministry of Petroleum and Natural Gas
- ☒ 2. Ministry of Home Affairs
- ☒ 3. Ministry of Railways
- ☒ 4. Ministry of Road Transport and Highways

Question ID : 630680409694  
Option 1 ID : 6306801597607  
Option 2 ID : 6306801597608  
Option 3 ID : 6306801597606  
Option 4 ID : 6306801597605  
Status : Answered  
Chosen Option : 1

Q.9 Which of the following teams won the 12<sup>th</sup> edition of the Ice Hockey Association of India's (IHAI) National Ice Hockey Championship for Men in 2023?

- Ans ☒ 1. Jammu and Kashmir Blue Team
- ☒ 2. Ladakh Scouts
- ☒ 3. Indo-Tibetan Border Police (ITBP)
- ☒ 4. Rimo Club Leh

Question ID : 630680303658  
Option 1 ID : 6306801181204  
Option 2 ID : 6306801181202  
Option 3 ID : 6306801181201  
Option 4 ID : 6306801181203  
Status : Not Answered  
Chosen Option : --



Q.10 The Swaran Singh committee had formulated \_\_\_\_\_-point code of fundamental duties.

- Ans ☒ 1. 11  
☒ 2. 7  
☒ 3. 9  
☒ 4. 8

Question ID : 630680282972  
Option 1 ID : 6306801100022  
Option 2 ID : 6306801100019  
Option 3 ID : 6306801100020  
Option 4 ID : 6306801100021  
Status : Answered  
Chosen Option : 4

Q.11 The author of Tarikh-i-Mubarak Shahi, Yahya Sirhindi claims that the founder of \_\_\_\_\_ dynasty of Delhi sultanate was a descendant of Prophet Muhammad.

- Ans ☒ 1. Sayyid  
☒ 2. Mamluk  
☒ 3. Lodhi  
☒ 4. Khalji

Question ID : 630680412509  
Option 1 ID : 6306801608861  
Option 2 ID : 6306801608860  
Option 3 ID : 6306801608862  
Option 4 ID : 6306801608859  
Status : Answered  
Chosen Option : 1

Q.12 Match Column-A with Column-B.

Column-A	Column-B
a. Alkanes	i. Ethane
b. Alkenes	ii. Butyne
c. Alkynes	iii. Propene
d. Aldehyde	iv. Methanal

- Ans ☒ 1. a-i, b-iii, c-ii, d-iv  
☒ 2. a-i, b-iii, c-iv, d-ii  
☒ 3. a-iv, b-iii, c-ii, d-i  
☒ 4. a-iii, b-iv, c-ii, d-i

Question ID : 630680134693  
Option 1 ID : 630680521592  
Option 2 ID : 630680521590  
Option 3 ID : 630680521591  
Option 4 ID : 630680521593  
Status : Answered  
Chosen Option : 1

Q.13 Prof M Yunus won the Nobel peace prize in which year?

- Ans ☒ 1. 2002  
☒ 2. 2006  
☒ 3. 2004  
☒ 4. 2001

Question ID : 630680407153  
Option 1 ID : 6306801587555  
Option 2 ID : 6306801587557  
Option 3 ID : 6306801587556  
Option 4 ID : 6306801587554  
Status : Answered  
Chosen Option : 4

Q.14 In which year will India organise the ICC Men's One-Day International World Cup Cricket?

- Ans ☒ 1. 2031  
☒ 2. 2027  
☒ 3. 2025  
☒ 4. 2030

Question ID : 630680177014  
Option 1 ID : 630680686263  
Option 2 ID : 630680686261  
Option 3 ID : 630680686260  
Option 4 ID : 630680686262  
Status : Answered  
Chosen Option : 1

Q.15 According to Mendeleev's Periodic Table, which element's properties matched up remarkably well with eka-aluminium?

- Ans ☒ 1. Titanium  
☒ 2. Germanium  
☒ 3. Gallium  
☒ 4. Scandium

Question ID : 63068051549  
Option 1 ID : 630680198433  
Option 2 ID : 630680198430  
Option 3 ID : 630680198431  
Option 4 ID : 630680198432  
Status : Answered  
Chosen Option : 2

Q.16 The adoption of the industrial policy of 1956 coincided with which Five-Year Plan?

- Ans ☒ 1. 3<sup>rd</sup> Five-Year Plan  
☒ 2. 1<sup>st</sup> Five-Year Plan  
☒ 3. 2<sup>nd</sup> Five-Year Plan  
☒ 4. 4<sup>th</sup> Five-Year Plan

Question ID : 630680407185  
Option 1 ID : 6306801587684  
Option 2 ID : 6306801587682  
Option 3 ID : 6306801587683  
Option 4 ID : 6306801587685  
Status : Answered  
Chosen Option : 3

Q.17 Which of the following classical dance forms is usually concluded with Tarangam?

- Ans ☒ 1. Kuchipudi  
☐ 2. Sattriya  
☐ 3. Kathakali  
☐ 4. Odissi

Question ID : 630680309144  
Option 1 ID : 6306801202755  
Option 2 ID : 6306801202756  
Option 3 ID : 6306801202754  
Option 4 ID : 6306801202753  
Status : Answered  
Chosen Option : 4

Q.18 For which of the following sources of financial resources may financial intermediation NOT be required?

- Ans ☐ 1. Raising equity via public offering  
☒ 2. Family funds  
☐ 3. Borrowing from banks  
☐ 4. Borrowing from All India Development Financial Institutions

Question ID : 630680407192  
Option 1 ID : 6306801587712  
Option 2 ID : 6306801587710  
Option 3 ID : 6306801587713  
Option 4 ID : 6306801587711  
Status : Answered  
Chosen Option : 1

Q.19 Which festival is popularly known as the festival of colours?

- Ans ☐ 1. Janmashtami  
☒ 2. Holi  
☐ 3. Diwali  
☐ 4. Maha Shivratri

Question ID : 630680409211  
Option 1 ID : 6306801595673  
Option 2 ID : 6306801595676  
Option 3 ID : 6306801595675  
Option 4 ID : 6306801595674  
Status : Answered  
Chosen Option : 2

Q.20 Who among the following Indian Classical dancers received the National Nritya Shiromani Award 2022?

- Ans ☐ 1. Aditi Mangaldas  
☐ 2. Shovana Narayan  
☒ 3. Aparna Satheesan  
☐ 4. Sangeeta Majumdar

Question ID : 630680409346  
Option 1 ID : 6306801596215  
Option 2 ID : 6306801596214  
Option 3 ID : 6306801596213  
Option 4 ID : 6306801596216  
Status : Not Answered  
Chosen Option : --

Q.21 Generally, Directive Principles are \_\_\_\_\_.

- Ans
- ☒ 1. negative directions
  - ☒ 2. arbitrary actions
  - ☒ 3. positive directions
  - ☒ 4. prohibitive in nature

Question ID : 630680296975  
Option 1 ID : 6306801155466  
Option 2 ID : 6306801155465  
Option 3 ID : 6306801155464  
Option 4 ID : 6306801155463  
Status : Answered  
Chosen Option : 3

Q.22 Which is an advanced weather satellite of India configured with improved imaging system and atmospheric sounder?

- Ans
- ☒ 1. RS-D1
  - ☒ 2. GSAT-7A
  - ☒ 3. INSAT -3D
  - ☒ 4. SROSS-2

Question ID : 630680407454  
Option 1 ID : 6306801588755  
Option 2 ID : 6306801588756  
Option 3 ID : 6306801588757  
Option 4 ID : 6306801588754  
Status : Not Answered  
Chosen Option : --

Q.23 Which of the following statements is NOT correct about River Ganga?

- Ans
- ☒ 1. The water level of River Ganga never depends on monsoon and climatic condition of the Himalaya.
  - ☒ 2. River Ganga and its river basin support lots of wonderful wildlife, particularly river dolphins, otters, freshwater turtles, and gharials.
  - ☒ 3. River Ganga flows from the Himalayas all the way to the Bay of Bengal.
  - ☒ 4. River Ganga in India is more than 2500 km long and is the most populated river basin in the world.

Question ID : 630680305594  
Option 1 ID : 6306801188752  
Option 2 ID : 6306801188751  
Option 3 ID : 6306801188750  
Option 4 ID : 6306801188749  
Status : Answered  
Chosen Option : 4

Q.24 In India, the International Day of Non-Violence is also celebrated as \_\_\_\_\_.

- Ans
- ☒ 1. Swami Vivekanand Jayanti
  - ☒ 2. Gandhi Jayanti
  - ☒ 3. Guru Ravidas Jayanti
  - ☒ 4. Mahavir Jayanti

Question ID : 630680410354  
Option 1 ID : 6306801600148  
Option 2 ID : 6306801600147  
Option 3 ID : 6306801600149  
Option 4 ID : 6306801600150  
Status : Answered  
Chosen Option : 2

Q.25 Which of the following cities of Delhi was founded by Ghiyasuddin Tughlaq?

- Ans ☒ 1. Qila-i-Rai Pithora  
☒ 2. Siri  
☒ 3. Tughluqabad  
☒ 4. Jahanpanah

Question ID : 630680412541  
Option 1 ID : 6306801608989  
Option 2 ID : 6306801608988  
Option 3 ID : 6306801608987  
Option 4 ID : 6306801608990  
Status : Answered  
Chosen Option : 3

Q.26 The number of players in baseball is:

- Ans ☒ 1. 7  
☒ 2. 8  
☒ 3. 9  
☒ 4. 6

Question ID : 630680115888  
Option 1 ID : 630680448883  
Option 2 ID : 630680448884  
Option 3 ID : 630680448885  
Option 4 ID : 630680448882  
Status : Answered  
Chosen Option : 3

Q.27 Who was executed as an accomplice to the murder of AMT Jackson?

- Ans ☒ 1. Matangini Hazra  
☒ 2. Khudiram Bose  
☒ 3. Hemu Kalani  
☒ 4. Krishnaji Gopal Karve

Question ID : 630680127478  
Option 1 ID : 630680494173  
Option 2 ID : 630680494174  
Option 3 ID : 630680494175  
Option 4 ID : 630680494172  
Status : Not Answered  
Chosen Option : --

Q.28 Which of the following are salt-water lakes?

- a. Sambhar lake
- b. Dal lake
- c. Wular lake
- d. Chilika lake

Ans ☒ 1. a and d

☒ 2. c and d

☒ 3. a and b

☒ 4. a and c

Question ID : 630680407376

Option 1 ID : 6306801588445

Option 2 ID : 6306801588443

Option 3 ID : 6306801588442

Option 4 ID : 6306801588444

Status : Answered

Chosen Option : 1

Q.29 The Indian National Congress formally took up the Swadeshi call in its Benaras session of 1905 under the presidentship of \_\_\_\_\_.

Ans ☒ 1. Gopal Krishna Gokhale

☒ 2. Jawahar Lal Nehru

☒ 3. Rajendra Prasad

☒ 4. Motilal Nehru

Question ID : 630680412420

Option 1 ID : 6306801608506

Option 2 ID : 6306801608504

Option 3 ID : 6306801608505

Option 4 ID : 6306801608503

Status : Answered

Chosen Option : 2

Q.30 Which of the following Ashokan rock edicts declares prohibition of animal sacrifice?

Ans ☒ 1. Major Rock Edict - II

☒ 2. Major Rock Edict - I

☒ 3. Major Rock Edict - IV

☒ 4. Major Rock Edict - III

Question ID : 630680412351

Option 1 ID : 6306801608228

Option 2 ID : 6306801608227

Option 3 ID : 6306801608230

Option 4 ID : 6306801608229

Status : Answered

Chosen Option : 4

Q.31 In which of the following is nicotine present in high quantity?

- Ans ☒ 1. Lime soda  
☒ 2. Tea  
☒ 3. Tobacco  
☒ 4. Butter milk

Question ID : 630680407529  
Option 1 ID : 6306801589056  
Option 2 ID : 6306801589054  
Option 3 ID : 6306801589055  
Option 4 ID : 6306801589057  
Status : Answered  
Chosen Option : 3

Q.32 According to the Global Hunger Index 2022, which neighbouring country is only behind India with a rank of 109 out of 121 countries?

- Ans ☒ 1. Afghanistan  
☒ 2. Nepal  
☒ 3. Pakistan  
☒ 4. Bangladesh

Question ID : 630680409719  
Option 1 ID : 6306801597708  
Option 2 ID : 6306801597706  
Option 3 ID : 6306801597707  
Option 4 ID : 6306801597705  
Status : Answered  
Chosen Option : 1

Q.33 Which of following gases are found in coal mines and marshy places?

- Ans ☒ 1. Nitrogen dioxide  
☒ 2. Ozone  
☒ 3. Methane  
☒ 4. Steam

Question ID : 63068074769  
Option 1 ID : 630680289234  
Option 2 ID : 630680289231  
Option 3 ID : 630680289233  
Option 4 ID : 630680289232  
Status : Answered  
Chosen Option : 3

Q.34 Radheshyam Barle, a recipient of Padma Shri in 2021, is an exponent of which of the following dance forms?

- Ans ☒ 1. Pali  
☒ 2. Karma  
☒ 3. Diwari  
☒ 4. Panthi

Question ID : 630680216040  
Option 1 ID : 630680838138  
Option 2 ID : 630680838137  
Option 3 ID : 630680838136  
Option 4 ID : 630680838135  
Status : Not Answered  
Chosen Option : --

Q.35 Which of the following events happened in 1950?

- Ans
- ☒ 1. First Five-Year Plan was started
  - ☒ 2. First National Agricultural Policy was adopted
  - ☒ 3. Industrial Policy Resolution was adopted
  - ☒ 4. The Planning Commission was set up

Question ID : 630680407122  
Option 1 ID : 6306801587432  
Option 2 ID : 6306801587430  
Option 3 ID : 6306801587431  
Option 4 ID : 6306801587433  
Status : Answered  
Chosen Option : 4

Q.36 Identify the largest phylum in the animal kingdom.

- Ans
- ☒ 1. Annelida
  - ☒ 2. Mollusca
  - ☒ 3. Platyhelminthis
  - ☒ 4. Arthropoda

Question ID : 630680407498  
Option 1 ID : 6306801588933  
Option 2 ID : 6306801588931  
Option 3 ID : 6306801588930  
Option 4 ID : 6306801588932  
Status : Answered  
Chosen Option : 4

Q.37 Which Article of the Indian Constitution mentions that 'All the executive action of the Government of a state shall be expressed to be taken in the name of the Governor'?

- Ans
- ☒ 1. Article 166(1)
  - ☒ 2. Article 163(1)
  - ☒ 3. Article 164(1)
  - ☒ 4. Article 165(1)

Question ID : 630680408220  
Option 1 ID : 6306801591775  
Option 2 ID : 6306801591778  
Option 3 ID : 6306801591777  
Option 4 ID : 6306801591776  
Status : Answered  
Chosen Option : 4

Q.38 Satyashodhak Samaj (truth seeker society) was established by which of the following social reformers?

- Ans
- ☒ 1. Bhimrao Ramji Ambedkar
  - ☒ 2. Jyotiba Phule
  - ☒ 3. Mahatma Gandhi
  - ☒ 4. Mahadev Govind Ranade

Question ID : 630680306339  
Option 1 ID : 6306801191710  
Option 2 ID : 6306801191709  
Option 3 ID : 6306801191712  
Option 4 ID : 6306801191711  
Status : Answered  
Chosen Option : 2



Q.39 The body of the phylum \_\_\_\_\_ is unsegmented and dorsoventrally flattened.

- Ans ☒ 1. Coelenterata  
☒ 2. Mollusca  
☒ 3. Arthropoda  
☒ 4. Platyhelminthes

Question ID : 63068094203  
Option 1 ID : 630680365508  
Option 2 ID : 630680365510  
Option 3 ID : 630680365509  
Option 4 ID : 630680365507  
Status : Answered  
Chosen Option : 4

Q.40 Who among the following is known as Tuti-e-Hind?

- Ans ☒ 1. Tansen  
☒ 2. Naubat Khan  
☒ 3. Surdas  
☒ 4. Amir Khusro

Question ID : 630680409338  
Option 1 ID : 6306801596182  
Option 2 ID : 6306801596184  
Option 3 ID : 6306801596183  
Option 4 ID : 6306801596181  
Status : Answered  
Chosen Option : 4

Q.41 Which of the following is a joint sector industry in India?

- Ans ☒ 1. Dabur  
☒ 2. NALCO  
☒ 3. Oil India Limited  
☒ 4. TISCO

Question ID : 630680701464  
Option 1 ID : 6306802747791  
Option 2 ID : 6306802747790  
Option 3 ID : 6306802747792  
Option 4 ID : 6306802747789  
Status : Answered  
Chosen Option : 3

Q.42 Which Article of the Indian Constitution states that "There shall be a High Court for each state"?

- Ans ☒ 1. Article 214  
☒ 2. Article 125  
☒ 3. Article 245  
☒ 4. Article 275

Question ID : 630680408324  
Option 1 ID : 6306801592192  
Option 2 ID : 6306801592191  
Option 3 ID : 6306801592193  
Option 4 ID : 6306801592194  
Status : Answered  
Chosen Option : 3

Q.43 How much will be 59°F in Celsius?

- Ans
- ☒ 1. 45°C
  - ☒ 2. 59°C
  - ☒ 3. 15°C
  - ☒ 4. 30°C

Question ID : 630680199613  
Option 1 ID : 630680774062  
Option 2 ID : 630680774061  
Option 3 ID : 630680774059  
Option 4 ID : 630680774060  
Status : Answered  
Chosen Option : 3

Q.44 As per the National Multidimensional Poverty Index Report 2023, which of the following UTs has the lowest poverty rate?

- Ans
- ☒ 1. Lakshadweep
  - ☒ 2. Ladakh
  - ☒ 3. Jammu and Kashmir
  - ☒ 4. Puducherry

Question ID : 630680869485  
Option 1 ID : 6306803405375  
Option 2 ID : 6306803405374  
Option 3 ID : 6306803405373  
Option 4 ID : 6306803405376  
Status : Answered  
Chosen Option : 4

Q.45 Who is the Chief Executive Head of the State?

- Ans
- ☒ 1. PM
  - ☒ 2. Governor
  - ☒ 3. President
  - ☒ 4. CM

Question ID : 630680408187  
Option 1 ID : 6306801591644  
Option 2 ID : 6306801591646  
Option 3 ID : 6306801591643  
Option 4 ID : 6306801591645  
Status : Answered  
Chosen Option : 1

Q.46 In which year, for the first time, was a resolution on the National Sports Policy laid in both Houses of Parliament?

- Ans
- ☒ 1. 1948
  - ☒ 2. 2000
  - ☒ 3. 1984
  - ☒ 4. 2014

Question ID : 63068055052  
Option 1 ID : 630680212238  
Option 2 ID : 630680212240  
Option 3 ID : 630680212239  
Option 4 ID : 630680212241  
Status : Answered  
Chosen Option : 3

Q.47 Which of the following committees recommended the fundamental duties?

- Ans ☒ 1. Ashok Mehta Committee  
☒ 2. Nehru Committee  
☒ 3. Balwinder Singh Committee  
☒ 4. Swaran Singh Committee

Question ID : 630680408293  
Option 1 ID : 6306801592067  
Option 2 ID : 6306801592070  
Option 3 ID : 6306801592069  
Option 4 ID : 6306801592068  
Status : Answered  
Chosen Option : 4

Q.48 Which of the following dance forms is represented by Kelucharan Mohapatra?

- Ans ☒ 1. Bharatnatyam  
☒ 2. Manipuri  
☒ 3. Odissi  
☒ 4. Kathak

Question ID : 630680216135  
Option 1 ID : 630680838516  
Option 2 ID : 630680838518  
Option 3 ID : 630680838517  
Option 4 ID : 630680838515  
Status : Answered  
Chosen Option : 3

Q.49 \_\_\_\_\_ wins the Best Male Playback Singer at the 67<sup>th</sup> National Film Awards.

- Ans ☒ 1. B Praak  
☒ 2. Sonu Nigam  
☒ 3. Shaan  
☒ 4. Arijit Singh

Question ID : 630680409225  
Option 1 ID : 6306801595730  
Option 2 ID : 6306801595732  
Option 3 ID : 6306801595731  
Option 4 ID : 6306801595729  
Status : Answered  
Chosen Option : 3

Q.50 Who among the following is the author of the book 'Those Pricey Thakur Girls'?

- Ans ☒ 1. Anuja Chauhan  
☒ 2. Anita Nair  
☒ 3. Pratibha Ray  
☒ 4. Preeti Shenoy

Question ID : 630680409372  
Option 1 ID : 6306801596319  
Option 2 ID : 6306801596318  
Option 3 ID : 6306801596320  
Option 4 ID : 6306801596317  
Status : Not Answered  
Chosen Option : --

Q.1 Simplify the following.  
 $72 \div 8 \times 4 + 40 - 35 \div 5 + 15$

- Ans ☒ 1. 24  
☒ 2. 84  
☒ 3. 9  
☒ 4. 48

Question ID : 630680869676  
Option 1 ID : 6306803406071  
Option 2 ID : 6306803406073  
Option 3 ID : 6306803406070  
Option 4 ID : 6306803406072  
Status : Answered  
Chosen Option : 2

Q.2 Solve the following:

$$(\tan\theta + \sec\theta + 1)(\cot\theta - \operatorname{cosec}\theta + 1) = ?$$

- Ans ☒ 1. 0  
☒ 2. 2  
☒ 3. -1  
☒ 4. 1

Question ID : 630680195561  
Option 1 ID : 630680758715  
Option 2 ID : 630680758713  
Option 3 ID : 630680758716  
Option 4 ID : 630680758714  
Status : Answered  
Chosen Option : 2

Q.3 The value of  $(\operatorname{cosec}\theta - \sin\theta)(\sec\theta - \cos\theta)(\tan\theta + \cot\theta)$  is:

- Ans ☒ 1. 1  
☒ 2.  $\sec\theta \operatorname{cosec}\theta$   
☒ 3. 3  
☒ 4. -3

Question ID : 630680869584  
Option 1 ID : 6306803405720  
Option 2 ID : 6306803405721  
Option 3 ID : 6306803405718  
Option 4 ID : 6306803405719  
Status : Answered  
Chosen Option : 1

Q.4 The breadth of a room is twice its height and half its length. The volume of the room is  $1728 \text{ m}^3$ . The length of the room is:

- Ans
- ☒ 1. 28 m
  - ☒ 2. 20 m
  - ☒ 3. 34 m
  - ☒ 4. 24 m

Question ID : 630680421608  
Option 1 ID : 6306801644898  
Option 2 ID : 6306801644895  
Option 3 ID : 6306801644896  
Option 4 ID : 6306801644897  
Status : Answered  
Chosen Option : 4

Q.5 In triangle ABC,  $AB = AC$  and  $\angle A = 70^\circ$ . Find the value of  $\angle C$ .

- Ans
- ☒ 1.  $75^\circ$
  - ☒ 2.  $65^\circ$
  - ☒ 3.  $45^\circ$
  - ☒ 4.  $55^\circ$

Question ID : 630680421456  
Option 1 ID : 6306801644290  
Option 2 ID : 6306801644289  
Option 3 ID : 6306801644287  
Option 4 ID : 6306801644288  
Status : Answered  
Chosen Option : 4

Q.6 Two successive price increases of 25% and 25% of an article are equivalent to a single price increase of:

- Ans
- ☒ 1. 52.25%
  - ☒ 2. 50.25%
  - ☒ 3. 48.50%
  - ☒ 4. 56.25%

Question ID : 630680429149  
Option 1 ID : 6306801674643  
Option 2 ID : 6306801674640  
Option 3 ID : 6306801674641  
Option 4 ID : 6306801674642  
Status : Answered  
Chosen Option : 4

Q.7 Find the curved surface area (in  $\text{cm}^2$ ) of a cone of radius 3 cm and height 4 cm.

- Ans
- ☒ 1.  $12\pi$
  - ☒ 2.  $14\pi$
  - ☒ 3.  $15\pi$
  - ☒ 4.  $7\pi$

Question ID : 630680421629

Option 1 ID : 6306801644981

Option 2 ID : 6306801644979

Option 3 ID : 6306801644982

Option 4 ID : 6306801644980

Status : Answered

Chosen Option : 3

Q.8 A part of ₹48,500 is invested at a simple interest of 15% per annum. The rest of the money is invested at the rate of 10% simple interest per annum after 2 years of the first investment. The ratio of interest after 5 years from the time when the first amount was invested is 5 : 3. How much is the second part that was invested (in ₹) at the rate of 10% simple interest?

- Ans
- ☒ 1. 29,100
  - ☒ 2. 20,940
  - ☒ 3. 19,400
  - ☒ 4. 24,900

Question ID : 630680428010

Option 1 ID : 6306801670085

Option 2 ID : 6306801670087

Option 3 ID : 6306801670084

Option 4 ID : 6306801670086

Status : Answered

Chosen Option : 4

Q.9 The value of  $\left(2\frac{1}{2} + 1\frac{3}{4} - \frac{1}{6}\right) \times 16 \div 49$  is:

- Ans
- ☒ 1.  $\frac{4}{7}$
  - ☒ 2.  $\frac{3}{9}$
  - ☒ 3.  $1\frac{1}{3}$
  - ☒ 4.  $2\frac{3}{4}$

Question ID : 630680428084

Option 1 ID : 6306801670381

Option 2 ID : 6306801670380

Option 3 ID : 6306801670382

Option 4 ID : 6306801670383

Status : Answered

Chosen Option : 3

Q.10 Sita takes a loan of Rs.35,000 at an interest rate of 10% compound interest, compounded annually. She agrees to pay two equal instalments in 2 years, one instalment at the end of each year. Find the value of each instalment.(Round off to the nearest integer)

- Ans
- ☐ 1. ₹10,167
  - ☐ 2. ₹30,167
  - ☒ 3. ₹20,167
  - ☐ 4. ₹40,167

Question ID : 630680107411

Option 1 ID : 630680417011

Option 2 ID : 630680417009

Option 3 ID : 630680417010

Option 4 ID : 630680417008

Status : Answered

Chosen Option : 3

Q.11 The following table shows the marks of a student in 5 tests in the subjects Maths, Physics, and Chemistry (out of 100 for each subject). Study the table and answer the question that follows.

Tests	Maths	Physics	Chemistry
1	80	69	91
2	94	79	85
3	88	81	95
4	92	76	90
5	96	90	84

The ratio of the average marks obtained by the student in test 2 to the average marks he got in Maths in all tests, is:

- Ans
- ☐ 1. 21:25
  - ☐ 2. 4:7
  - ☐ 3. 4:3
  - ☒ 4. 43:45

Question ID : 630680392971

Option 1 ID : 6306801532218

Option 2 ID : 6306801532220

Option 3 ID : 6306801532219

Option 4 ID : 6306801532221

Status : Answered

Chosen Option : 4

Q.12 Simplify the given expression.

$$\frac{\left(2\frac{1}{7} + 6\frac{1}{7}\right) \div \frac{9}{7}}{1\frac{1}{9} \div \left\{\frac{7}{9} + \left(\frac{4}{9} \div \frac{4}{3}\right)\right\}}$$

Ans

✗ 1.  $\frac{56}{9}$

✗ 2.  $\frac{55}{9}$

✓ 3.  $\frac{58}{9}$

✗ 4.  $\frac{53}{9}$

Question ID : 630680427976

Option 1 ID : 6306801669949

Option 2 ID : 6306801669950

Option 3 ID : 6306801669948

Option 4 ID : 6306801669951

Status : Answered

Chosen Option : 3

Q.13 The following table shows the yearly production of bags (in thousands) by different companies.

Company	2012	2013	2014	2015
A	29	37	38	42
B	30	38	40	39
C	35	30	45	43
D	37	35	42	45

The total production of company A over the given years is what percentage of the total production of company D over the given years?

Ans ✓ 1. 91.82%

✗ 2. 98.21%

✗ 3. 82.91%

✗ 4. 89.21%

Question ID : 630680428288

Option 1 ID : 6306801671198

Option 2 ID : 6306801671197

Option 3 ID : 6306801671196

Option 4 ID : 6306801671199

Status : Answered

Chosen Option : 1



Q.14 In a school, the total number of boys is 20% more than the total number of girls. What is the ratio of the number of boys to that of girls in the school?

- Ans ☒ 1. 6 : 5  
☐ 2. 4 : 5  
☐ 3. 5 : 3  
☐ 4. 5 : 6

Question ID : 630680428968  
Option 1 ID : 6306801673918  
Option 2 ID : 6306801673917  
Option 3 ID : 6306801673916  
Option 4 ID : 6306801673919  
Status : Answered  
Chosen Option : 1

Q.15 If one angle of triangle PQR is greater than the sum of the other two, the triangle PQR will be:

- Ans ☐ 1. equilateral  
☐ 2. acute angle  
☒ 3. obtuse angle  
☐ 4. right angle

Question ID : 630680421467  
Option 1 ID : 6306801644331  
Option 2 ID : 6306801644332  
Option 3 ID : 6306801644333  
Option 4 ID : 6306801644334  
Status : Answered  
Chosen Option : 3

Q.16 If two kinds of rice which cost ₹25 a kg and ₹40 a kg are mixed in the ratio of 3 : 2, then find the cost of the mixture per kg.

- Ans ☒ 1. ₹31  
☐ 2. ₹30  
☐ 3. ₹32  
☐ 4. ₹33

Question ID : 630680869685  
Option 1 ID : 6306803406107  
Option 2 ID : 6306803406106  
Option 3 ID : 6306803406108  
Option 4 ID : 6306803406109  
Status : Answered  
Chosen Option : 1

**Q.17** In the following table, the achievement of 10 boys and 10 girls in Math has been given. Study the table and select the correct statement.

Boys	Girls
56	35
75	88
34	95
49	99
89	67
99	82
94	97
59	63
82	79
79	81

- Ans**
- ☒ 1. The average achievement of the boys and girls is same.
  - ☒ 2. The given data is insufficient to draw any meaningful conclusion.
  - ☒ 3. The average achievement of the girls is more than that of the boys.
  - ☒ 4. The average achievement of the boys is more than that of the girls.

Question ID : 630680429203  
Option 1 ID : 6306801674856  
Option 2 ID : 6306801674859  
Option 3 ID : 6306801674858  
Option 4 ID : 6306801674857  
Status : Answered  
Chosen Option : 1

**Q.18** A shopkeeper wanted to sell ₹2,000 worth of products. But he had two options, giving three successive discounts of 10% each or giving a single discount of 28%. What was the difference between the two options of discounts (in rupees)?

- Ans**
- ☒ 1. 16
  - ☒ 2. 28
  - ☒ 3. 18
  - ☒ 4. 22

Question ID : 630680428640  
Option 1 ID : 6306801672606  
Option 2 ID : 6306801672604  
Option 3 ID : 6306801672605  
Option 4 ID : 6306801672607  
Status : Answered  
Chosen Option : 3

**Q.19** Amita can build a room in the same amount of time that Bina and Sita working together can build. If Amita and Bina together could do it in 25 days and Sita alone in 35 days, then how many days are required for Bina alone to do the same work?

- Ans**
- ☒ 1. 180 Days
  - ☒ 2. 165 Days
  - ☒ 3. 152 Days
  - ☒ 4. 175 Days

Question ID : 630680869699  
Option 1 ID : 6306803406165  
Option 2 ID : 6306803406162  
Option 3 ID : 6306803406163  
Option 4 ID : 6306803406164  
Status : Answered  
Chosen Option : 4

Q.20 The cost price of two articles is equal. One article is sold at a profit of 12% and the other article for ₹3,600 more than the first. If the net profit is  $15\frac{27}{51}\%$ , then what is the cost price of each article?

- Ans
- ☒ 1. ₹50,990
  - ☒ 2. ₹50,000
  - ☒ 3. ₹51,000
  - ☒ 4. ₹52,150

Question ID : 630680215283  
Option 1 ID : 630680835131  
Option 2 ID : 630680835134  
Option 3 ID : 630680835133  
Option 4 ID : 630680835132  
Status : Answered  
Chosen Option : 2

Q.21 Simplify:

$$\left[ \left( 7\frac{1}{4} \right)^2 - \left( 5\frac{4}{5} \right)^2 \right] \div 5\frac{4}{5} \times \frac{16}{9}$$

- Ans
- ☒ 1. 9.3
  - ☒ 2. 7.4
  - ☒ 3. 5.8
  - ☒ 4. 3.1

Question ID : 630680427988  
Option 1 ID : 6306801669996  
Option 2 ID : 6306801669997  
Option 3 ID : 6306801669998  
Option 4 ID : 6306801669999  
Status : Answered  
Chosen Option : 3

Q.22  $\tan^4 A + \tan^2 A$  is equal to:

- Ans
- ☒ 1.  $\sec^4 A - \sec^2 A$
  - ☒ 2.  $\sec^2 A - \sec^4 A$
  - ☒ 3.  $\sec^4 A + \sec^2 A$
  - ☒ 4.  $-(\sec^2 A + \sec^4 A)$

Question ID : 630680869595  
Option 1 ID : 6306803405762  
Option 2 ID : 6306803405764  
Option 3 ID : 6306803405763  
Option 4 ID : 6306803405765  
Status : Answered  
Chosen Option : 1

Q.23 A boat can travel 16.9 km downstream in 52 min. If the speed of the current is 3 km/h, then how much time (in hours) will the boat take to travel 84 km upstream?

Ans ☒ 1. 6.22

☐ 2. 6

☐ 3. 13.5

☐ 4. 7.5

Question ID : 630680428846

Option 1 ID : 6306801673430

Option 2 ID : 6306801673428

Option 3 ID : 6306801673431

Option 4 ID : 6306801673429

Status : Answered

Chosen Option : 1

Q.24 In a 100-km journey, the average speed of S is 40 km/h. He covers the first 60 km in 40 minutes and the next 20 km in 50 minutes. What is his speed in the last 20 km (in km/h)?

Ans ☐ 1. 30

☐ 2. 40

☐ 3. 25

☒ 4. 20

Question ID : 630680428718

Option 1 ID : 6306801672918

Option 2 ID : 6306801672919

Option 3 ID : 6306801672917

Option 4 ID : 6306801672916

Status : Answered

Chosen Option : 4

Q.25 If  $m \times 7 + 4 - 6 \div 3 - 7 + 45 \div 5 \times 4 + 49 = 87$ , then the value of m is:

Ans ☐ 1. 0

☐ 2. 14

☒ 3. 1

☐ 4. 7

Question ID : 630680428263

Option 1 ID : 6306801671096

Option 2 ID : 6306801671099

Option 3 ID : 6306801671097

Option 4 ID : 6306801671098

Status : Answered

Chosen Option : 3

Q.26 The following table shows the marks obtained out of 100, by four students in four different subjects.

Students	Hindi	Maths	Science	Social
Arnav	83	87	90	92
Ronak	75	89	79	82
Shivam	88	95	90	87
Sonu	92	85	90	88

The total marks scored by Ronak in all the subjects is what percentage of the total marks scored by Shivam, Sonu, Arnav together in all the subjects?

- Ans
- ☒ 1. 44.46%
  - ☒ 2. 34.63%
  - ☒ 3. 40.63%
  - ☒ 4. 30.46%

Question ID : 630680428287  
Option 1 ID : 6306801671195  
Option 2 ID : 6306801671192  
Option 3 ID : 6306801671194  
Option 4 ID : 6306801671193  
Status : Answered  
Chosen Option : 2

Q.27 Akash and Vikash can complete a work in 40 days and 60 days, respectively. In how many days will the entire work be completed if they work on alternate days, starting with Akash?

- Ans
- ☒ 1. 52
  - ☒ 2. 50
  - ☒ 3. 48
  - ☒ 4. 42

Question ID : 630680428410  
Option 1 ID : 6306801671687  
Option 2 ID : 6306801671686  
Option 3 ID : 6306801671685  
Option 4 ID : 6306801671684  
Status : Answered  
Chosen Option : 3

Q.28 Find the value of the following expression.

$2 \times 8 \div 4 - 5 \text{ of } 3 + 6 \div 3 \times 2 - 6 \text{ of } 3 + 5$

- Ans
- ☒ 1. -20
  - ☒ 2. 20
  - ☒ 3. -15
  - ☒ 4. 15

Question ID : 630680428228  
Option 1 ID : 6306801670958  
Option 2 ID : 6306801670959  
Option 3 ID : 6306801670956  
Option 4 ID : 6306801670957  
Status : Answered  
Chosen Option : 1

Q.29 Determine the value of the product  $(4a + 3b)(16a^2 - 12ab + 9b^2)$  for  $a = 2$  and  $b = 3$ .

- Ans
- ☒ 1. 1141
  - ☒ 2. 1231
  - ☒ 3. 1241
  - ☒ 4. 1131

Question ID : 630680413558  
Option 1 ID : 6306801613057  
Option 2 ID : 6306801613059  
Option 3 ID : 6306801613058  
Option 4 ID : 6306801613056  
Status : Answered  
Chosen Option : 3

Q.30 A school has two rectangular playgrounds, which are similar in shape. If the length and the breadth of the first playground are given as 224 m and 160 m, respectively, then which of the following options CANNOT be the dimensions of the second playground?

- Ans
- ☒ 1. Length = 168 m; Breadth = 120 m
  - ☒ 2. Length = 343 m; Breadth = 255 m
  - ☒ 3. Length = 273 m; Breadth = 195 m
  - ☒ 4. Length = 210 m; Breadth = 150 m

Question ID : 630680428447  
Option 1 ID : 6306801671832  
Option 2 ID : 6306801671833  
Option 3 ID : 6306801671835  
Option 4 ID : 6306801671834  
Status : Answered  
Chosen Option : 2

Q.31 42% of Ranita's weekly income is equal to 56% of Bhaskar's weekly income. If Bhaskar's weekly income was raised by ₹ 200, while Ranita's weekly income did not change, the ratio of the weekly incomes of Ranita and Bhaskar, respectively, would have been 5 : 4. What is Ranita's weekly income (in ₹)?

- Ans
- ☒ 1. 3000
  - ☒ 2. 4000
  - ☒ 3. 3600
  - ☒ 4. 4200

Question ID : 630680428913  
Option 1 ID : 6306801673696  
Option 2 ID : 6306801673698  
Option 3 ID : 6306801673697  
Option 4 ID : 6306801673699  
Status : Answered  
Chosen Option : 2

Q.32 A trader sells an article at 16% below its cost price. Had he sold it for ₹192.20 more, he would have gained 15%. The new selling price (in ₹) of the article is:

- Ans
- ☒ 1. 724
  - ☒ 2. 742
  - ☒ 3. 731
  - ☒ 4. 713

Question ID : 630680429087  
Option 1 ID : 6306801674393  
Option 2 ID : 6306801674395  
Option 3 ID : 6306801674392  
Option 4 ID : 6306801674394  
Status : Answered  
Chosen Option : 4

Q.33 Simplify the given expression.

$$4 \times 5 \div 4 \text{ of } 5 \times 4 \div (6 + 6 \times 6 \div 6 \text{ of } 6 - 6 \div 6 \times 6)$$

- Ans
- ☒ 1. 12
  - ☒ 2. 4
  - ☒ 3. 2
  - ☒ 4. 20

Question ID : 630680428054  
Option 1 ID : 6306801670261  
Option 2 ID : 6306801670262  
Option 3 ID : 6306801670263  
Option 4 ID : 6306801670260  
Status : Answered  
Chosen Option : 2

Q.34 If  $\sin^4\theta + \cos^4\theta = 2\sin^2\theta\cos^2\theta$ ,  $0^\circ < \theta < 90^\circ$ , then find the value of  $\cot\theta$ .

- Ans
- ☒ 1.  $\frac{1}{\sqrt{2}}$
  - ☒ 2.  $\frac{1}{3}$
  - ☒ 3. 1
  - ☒ 4.  $\frac{1}{2}$

Question ID : 630680398780  
Option 1 ID : 6306801555125  
Option 2 ID : 6306801555122  
Option 3 ID : 6306801555124  
Option 4 ID : 6306801555123  
Status : Answered  
Chosen Option : 3

**Q.35** A woman working in a company was supplied a rectangular solid (cuboid shape) of wax with dimensions 70 cm , 44 cm and 20 cm to prepare cylindrical candles, each 14 cm in diameter and 20 cm of height. Find the number of candles.

**Ans** ☒ 1. 20

☐ 2. 15

☐ 3. 10

☐ 4. 30

Question ID : 63068076069

Option 1 ID : 630680294381

Option 2 ID : 630680294383

Option 3 ID : 630680294384

Option 4 ID : 630680294382

Status : Answered

Chosen Option : 1

**Q.36** Two trains, 140 m and 120 m in length, are running in the same direction at the speed of 60 km/h and 78 km/h, respectively. In how much time will they completely cross each other?

**Ans** ☐ 1. 58 seconds

☐ 2. 65 seconds

☐ 3. 48 seconds

☒ 4. 52 seconds

Question ID : 630680869705

Option 1 ID : 6306803406187

Option 2 ID : 6306803406186

Option 3 ID : 6306803406189

Option 4 ID : 6306803406188

Status : Answered

Chosen Option : 4

**Q.37** The difference between the two perpendicular sides of a right-angled triangle is 2 cm and its area is  $24 \text{ cm}^2$ . What is the perimeter (in cm) of the triangle?

**Ans** ☐ 1. 18

☐ 2. 16

☐ 3. 14

☒ 4. 24

Question ID : 630680421365

Option 1 ID : 6306801643925

Option 2 ID : 6306801643924

Option 3 ID : 6306801643926

Option 4 ID : 6306801643923

Status : Answered

Chosen Option : 4



Q.38 A 320 m long train completely crosses a 240 m long train, coming from the opposite direction, in y seconds. If the first train is travelling at the speed of 44 km/h and the second train is travelling at 56.8 km/h, then what is the value of y?

- Ans ☒ 1. 18  
☒ 2. 22  
☒ 3. 21  
☒ 4. 20

Question ID : 630680428437  
Option 1 ID : 6306801671793  
Option 2 ID : 6306801671792  
Option 3 ID : 6306801671794  
Option 4 ID : 6306801671795  
Status : Answered  
Chosen Option : 4

Q.39 Study the given table and answer the question that follows.

Percentage of marks obtained by 5 students in different subjects

Subjects →	History 250	Maths 200	Economics 250	Hindi 150	English 150
Students↓					
Vikas	60	80	90	60	95
Shyam	90	70	80	70	40
Sohan	70	90	95	80	75
Mohan	80	60	70	95	80
Mohit	90	50	85	85	80

The marks obtained by Sohan in maths are \_\_\_\_\_ than that obtained by Shyam in maths.

- Ans ☒ 1. 40 more  
☒ 2. 30 less  
☒ 3. 40 less  
☒ 4. 30 more

Question ID : 630680386149  
Option 1 ID : 6306801505309  
Option 2 ID : 6306801505307  
Option 3 ID : 6306801505306  
Option 4 ID : 6306801505308  
Status : Answered  
Chosen Option : 1

Q.40 Study the given table and answer the question that follows.  
The table shows the number of students studying in 6 different classes of 6 different schools.

School	V	VI	VII	VIII	IX	X
P	152	160	145	156	147	144
Q	148	166	150	155	157	143
R	161	152	140	145	143	165
S	159	142	149	140	142	168
T	147	144	158	163	154	150
U	150	160	162	160	161	140
Total	917	924	904	919	904	910

The number of students studying in class VII from school U forms approximately what percentage of the total number of students from all the classes together from that school?

- Ans
- ☐ 1. 19%
  - ☐ 2. 15%
  - ☐ 3. 21%
  - ☒ 4. 17%

Question ID : 630680428324  
Option 1 ID : 6306801671342  
Option 2 ID : 6306801671340  
Option 3 ID : 6306801671343  
Option 4 ID : 6306801671341  
Status : Answered  
Chosen Option : 3

Q.41 Simplify the given expression.

$$\left(7.2 \times 4.1 \div 12.3 + 22.5 \text{ of } \frac{1}{25} - \frac{1}{10}\right)$$

- Ans
- ☐ 1. 4.9
  - ☐ 2. 9.6
  - ☐ 3. 7.4
  - ☒ 4. 3.2

Question ID : 630680428045  
Option 1 ID : 6306801670226  
Option 2 ID : 6306801670224  
Option 3 ID : 6306801670225  
Option 4 ID : 6306801670227  
Status : Answered  
Chosen Option : 4

Q.42 If  $a + b + c = 15$  and  $ab + bc + ca = 35$ , then find the value of  $a^3 + b^3 + c^3 - 3abc$ .

- Ans
- ☐ 1. 1200
  - ☐ 2. 2100
  - ☒ 3. 1800
  - ☐ 4. 1500

Question ID : 630680413573  
Option 1 ID : 6306801613116  
Option 2 ID : 6306801613119  
Option 3 ID : 6306801613118  
Option 4 ID : 6306801613117  
Status : Answered  
Chosen Option : 3

Q.43 Simplify

$$\left(\frac{3}{4} + \frac{5}{4}\right) \times \left(\frac{9}{5} - \frac{4}{5}\right) \div \left(\frac{3}{2} + \frac{1}{2}\right).$$

Ans ☒ 1. 1

☐ 2. -1

☐ 3. 2

☐ 4. -2

Question ID : 630680428124

Option 1 ID : 6306801670540

Option 2 ID : 6306801670541

Option 3 ID : 6306801670542

Option 4 ID : 6306801670543

Status : Answered

Chosen Option : 1

Q.44 A shopkeeper offers a discount of 24 % on the marked price. On a special sale day, he offers an extra 30% off coupon after the first discount. If the article was sold for ₹ 700.70 comma what is the marked price left parenthesis in ₹ right parenthesis of the article ?

Ans ☐ 1. 17475

☐ 2. 14745

☒ 3. 14475

☐ 4. 17745

Question ID : 630680869691

Option 1 ID : 6306803406131

Option 2 ID : 6306803406133

Option 3 ID : 6306803406130

Option 4 ID : 6306803406132

Status : Not Answered

Chosen Option : --

Q.45 The distance between the centres of the two circles, with radii 3 cm and 2 cm, respectively, is 13 cm. The length (in cm) of a transverse common tangent is:

Ans ☐ 1. 18 cm

☐ 2. 9 cm

☐ 3. 16 cm

☒ 4. 12 cm

Question ID : 630680421436

Option 1 ID : 6306801644210

Option 2 ID : 6306801644207

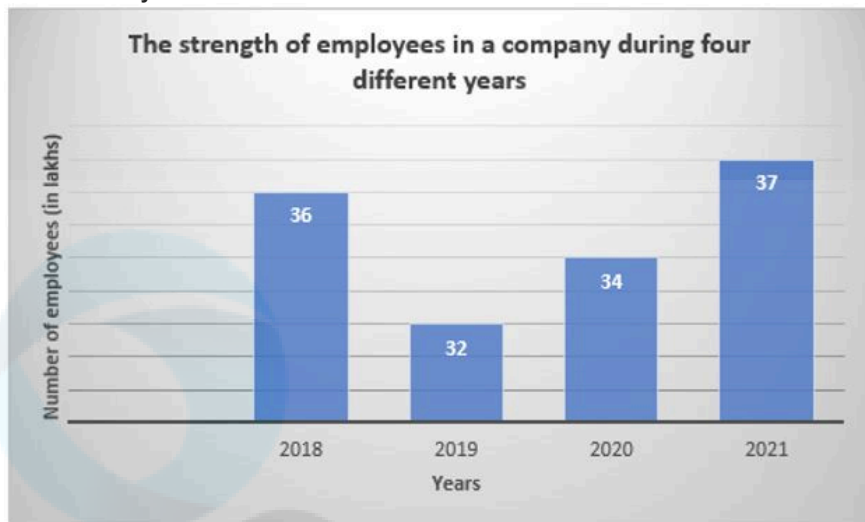
Option 3 ID : 6306801644209

Option 4 ID : 6306801644208

Status : Answered

Chosen Option : 4

Q.46 The given bar graph shows the strength of employees (in lakhs) of a company during four different years.



What was the percentage increase in employees in 2020 over 2019?

Ans

✓ 1.  $6\frac{1}{4}\%$

✗ 2.  $6\frac{3}{4}\%$

✗ 3.  $5\frac{1}{4}\%$

✗ 4.  $4\frac{3}{4}\%$

Question ID : 630680360372

Option 1 ID : 6306801403393

Option 2 ID : 6306801403394

Option 3 ID : 6306801403395

Option 4 ID : 6306801403396

Status : Answered

Chosen Option : 1

Q.47 What must be added to  $(x^3 - 3x^2 + 4x - 75)$  to obtain a polynomial that is exactly divisible by  $(x - 5)$ ?

Ans

✗ 1. 4

✗ 2. 6

✗ 3. 2

✓ 4. 5

Question ID : 630680413587

Option 1 ID : 6306801613172

Option 2 ID : 6306801613174

Option 3 ID : 6306801613175

Option 4 ID : 6306801613173

Status : Answered

Chosen Option : 4

**Q.48** A is 25% more than B and B is 30% less than C. If C is 20% more than D, then by what percentage is A more than D?

**Ans** ☒ 1. 5%

☐ 2. 3%

☐ 3. 6%

☐ 4. 2%

Question ID : 630680428142

Option 1 ID : 6306801670614

Option 2 ID : 6306801670612

Option 3 ID : 6306801670615

Option 4 ID : 6306801670613

Status : Answered

Chosen Option : 1

**Q.49** The height and radius of a cone-shaped storage tank are 9 ft. and 7 ft., respectively. Find the volume of water the tank can hold? (Use  $\pi = \frac{22}{7}$ )

**Ans** ☐ 1. 1423 cubic ft.

☒ 2. 462 cubic ft.

☐ 3. 1386 cubic ft.

☐ 4. 527 cubic ft.

Question ID : 630680421562

Option 1 ID : 6306801644713

Option 2 ID : 6306801644712

Option 3 ID : 6306801644711

Option 4 ID : 6306801644714

Status : Answered

Chosen Option : 2

**Q.50** A cone of slant height 4.2 units has a lateral surface area  $13.2 \text{ units}^2$ . The radius of the base is:

**Ans** ☐ 1. 2 units

☐ 2. 1.5 units

☐ 3. 2.5 units

☒ 4. 1 unit

Question ID : 630680421558

Option 1 ID : 6306801644697

Option 2 ID : 6306801644696

Option 3 ID : 6306801644698

Option 4 ID : 6306801644695

Status : Answered

Chosen Option : 4

Q.1 The following sentence has been divided into parts. One of them may contain an error. Select the part that contains the error from the given options. If you don't find any error, mark 'No error' as your answer.  
When Ramu was working / as a clerk, / he asked me money.

- Ans
- ☒ 1. When Ramu was working
  - ☒ 2. as a clerk
  - ☒ 3. No error
  - ☒ 4. he asked me money

Question ID : 630680145313  
Option 1 ID : 630680562226  
Option 2 ID : 630680562228  
Option 3 ID : 630680562229  
Option 4 ID : 630680562227  
Status : Answered  
Chosen Option : 4

Q.2 Select the option that can be used as a one-word substitute for the given group of words.  
During vacations, Geeta saw a saltwater lake separated from the sea by rocks and sand where she did kayak for the first time.

- Ans
- ☒ 1. lagoon
  - ☒ 2. river
  - ☒ 3. ditch
  - ☒ 4. sea

Question ID : 630680414728  
Option 1 ID : 6306801617655  
Option 2 ID : 6306801617656  
Option 3 ID : 6306801617658  
Option 4 ID : 6306801617657  
Status : Answered  
Chosen Option : 3

Q.3 Select the INCORRECTLY spelt word.

- Ans
- ☒ 1. Rhinoceros
  - ☒ 2. Bueraucracy
  - ☒ 3. Acquaintance
  - ☒ 4. Miscellaneous

Question ID : 630680409888  
Option 1 ID : 6306801598382  
Option 2 ID : 6306801598383  
Option 3 ID : 6306801598381  
Option 4 ID : 6306801598384  
Status : Answered  
Chosen Option : 1

Q.4 Select the most appropriate article to fill in the blank (ø-no article).  
\_\_\_\_\_ SDO is the head of the sub-division of \_\_\_\_ government organisation.

- Ans
- ☒ 1. a; a
  - ☒ 2. Ø; a
  - ☒ 3. an; ø
  - ☒ 4. an; a

Question ID : 630680415352  
Option 1 ID : 6306801620158  
Option 2 ID : 6306801620156  
Option 3 ID : 6306801620155  
Option 4 ID : 6306801620157  
Status : Answered  
Chosen Option : 2

Q.5 Select the option that is similar in meaning to the underlined word in the following sentence.

Looking after small children is a real conundrum for working parents.

- Ans
- ☒ 1. peace
  - ☒ 2. plan
  - ☒ 3. problem
  - ☒ 4. pacification

Question ID : 630680213114  
Option 1 ID : 630680826506  
Option 2 ID : 630680826504  
Option 3 ID : 630680826505  
Option 4 ID : 630680826503  
Status : Answered  
Chosen Option : 3

Q.6 Select the INCORRECTLY spelt word.

- Ans
- ☒ 1. Notation
  - ☒ 2. Witharing
  - ☒ 3. Gallantry
  - ☒ 4. Vagabond

Question ID : 630680409899  
Option 1 ID : 6306801598425  
Option 2 ID : 6306801598428  
Option 3 ID : 6306801598427  
Option 4 ID : 6306801598426  
Status : Answered  
Chosen Option : 2

**Q.7** The following sentence has been divided into parts. One of them contains an error.  
Select the part that contains the error from the given options.  
Mrs. Rani / works for / a international / school.

- Ans** ☒ 1. works for  
☒ 2. school  
☒ 3. a international  
☒ 4. Mrs. Rani

Question ID : 630680184894  
Option 1 ID : 630680716538  
Option 2 ID : 630680716540  
Option 3 ID : 630680716539  
Option 4 ID : 630680716537  
Status : Answered  
Chosen Option : 3

**Q.8** Select the most appropriate option that can substitute the highlighted words in the given sentence.

His interpretation of the facts was impressive.

- Ans** ☒ 1. understands of realities  
☒ 2. understand of realities  
☒ 3. understood of realities  
☒ 4. understanding of realities

Question ID : 630680701382  
Option 1 ID : 6306802747464  
Option 2 ID : 6306802747461  
Option 3 ID : 6306802747463  
Option 4 ID : 6306802747462  
Status : Answered  
Chosen Option : 4

**Q.9** Select the most appropriate meaning of the given idiom.  
Nip in the bud

- Ans** ☒ 1. To publicise a long-kept secret  
☒ 2. To stop something from growing beyond limit  
☒ 3. To complete a prolonged or unfinished work  
☒ 4. To suppress something at an early stage

Question ID : 630680206943  
Option 1 ID : 630680802374  
Option 2 ID : 630680802371  
Option 3 ID : 630680802373  
Option 4 ID : 630680802372  
Status : Answered  
Chosen Option : 4



**Q.10** Select the sentence that has a grammatical error.

- Ans    ✓ 1. I will be drive into town later on.  
         ✗ 2. I will be driving into town later on.  
         ✗ 3. I might drive into town later on.  
         ✗ 4. I could be driving into town later on.

Question ID : 630680181922  
Option 1 ID : 630680704924  
Option 2 ID : 630680704922  
Option 3 ID : 630680704925  
Option 4 ID : 630680704923  
Status : Answered  
Chosen Option : 2

**Q.11** Select the option that can be used as a one-word substitute for the given group of words.  
A soldier who fights for the sake of money

- Ans    ✗ 1. Marine  
         ✗ 2. Veteran  
         ✓ 3. Mercenary  
         ✗ 4. Admiral

Question ID : 630680176598  
Option 1 ID : 630680684614  
Option 2 ID : 630680684615  
Option 3 ID : 630680684612  
Option 4 ID : 630680684613  
Status : Answered  
Chosen Option : 3

**Q.12** Select the option that correctly rectifies the spelling error in the given sentence.  
The movie is just beggining.

- Ans    ✗ 1. Biginning  
         ✓ 2. Beginning  
         ✗ 3. Beginnig  
         ✗ 4. Begining

Question ID : 630680701371  
Option 1 ID : 6306802747420  
Option 2 ID : 6306802747418  
Option 3 ID : 6306802747419  
Option 4 ID : 6306802747417  
Status : Answered  
Chosen Option : 2

Q.13 Select the most appropriate synonym of the given word.  
Habitual

- Ans ☒ 1. Considerate  
☒ 2. Continuous  
☒ 3. Diverse  
☒ 4. Pertinent

Question ID : 630680204300  
Option 1 ID : 630680792285  
Option 2 ID : 630680792283  
Option 3 ID : 630680792286  
Option 4 ID : 630680792284  
Status : Answered  
Chosen Option : 2

Q.14 Select the option that can be used as a one-word substitute for the underlined group of words.  
The liberal leadership simply joined the ranks of the existing government by the few.

- Ans ☒ 1. Plutocracy  
☒ 2. Democracy  
☒ 3. Autocracy  
☒ 4. Oligarchy

Question ID : 630680414690  
Option 1 ID : 6306801617505  
Option 2 ID : 6306801617503  
Option 3 ID : 6306801617506  
Option 4 ID : 6306801617504  
Status : Answered  
Chosen Option : 4

Q.15 Select the most appropriate ANTONYM of the underlined word in the given sentence.  
Recession fettered the company from any further investments.

- Ans ☒ 1. Concealed  
☒ 2. Valuable  
☒ 3. Depended  
☒ 4. Liberated

Question ID : 630680295944  
Option 1 ID : 6306801151490  
Option 2 ID : 6306801151488  
Option 3 ID : 6306801151491  
Option 4 ID : 6306801151489  
Status : Answered  
Chosen Option : 4

**Q.16** Select the most appropriate option that can substitute the underlined segment in the given sentence. If there is no need to substitute it, select 'No substitution'.  
If his father will give money, he will buy a sports bike.

- Ans ☒ 1. No substitution
- ☒ 2. If his father give money
- ☒ 3. If his father gave money
- ☒ 4. If his father gives money

Question ID : 630680414535  
Option 1 ID : 6306801616902  
Option 2 ID : 6306801616901  
Option 3 ID : 6306801616899  
Option 4 ID : 6306801616900  
Status : Answered  
Chosen Option : 4

**Q.17** Select the most appropriate synonym of the given word.  
Insipid

- Ans ☒ 1. Dismal
- ☒ 2. Tasteless
- ☒ 3. Obscure
- ☒ 4. Idle

Question ID : 630680383228  
Option 1 ID : 6306801493819  
Option 2 ID : 6306801493822  
Option 3 ID : 6306801493821  
Option 4 ID : 6306801493820  
Status : Answered  
Chosen Option : 2

**Q.18** Identify the proper explanation of the error in the given sentence.

Mohan insisted to go there.

- Ans ☒ 1. Error is with the tense. The correct sentence should read like this: Mohan insisting to go there.
- ☒ 2. Error is in the sentence formation. Preposition and gerund are required. The correct sentence should read like this: Mohan insisted on going there.
- ☒ 3. Error is with the verb. The correct sentence should read like this: Mohan insist to going there.
- ☒ 4. Error is with the preposition. The correct sentence should read like this: Mohan insisted go there.

Question ID : 630680409892  
Option 1 ID : 6306801598399  
Option 2 ID : 6306801598397  
Option 3 ID : 6306801598400  
Option 4 ID : 6306801598398  
Status : Answered  
Chosen Option : 2

Q.19 Select the most appropriate meaning of the given idiom.

Spill the beans

- Ans ☒ 1. Reveal a secret
- ☐ 2. Accomplish a lot
- ☐ 3. Cornered by someone
- ☐ 4. Tremble at possibilities

Question ID : 630680517286  
Option 1 ID : 6306802021540  
Option 2 ID : 6306802021541  
Option 3 ID : 6306802021543  
Option 4 ID : 6306802021542  
Status : Answered  
Chosen Option : 1

Q.20 The following sentence has been split into four segments. Identify the segment that contains a grammatical error.  
Most of the committee / are here to / decide the fate of / this ancient building.

- Ans ☒ 1. are here to
- ☐ 2. Most of the committee
- ☐ 3. decide the fate of
- ☐ 4. this ancient building.

Question ID : 630680295882  
Option 1 ID : 6306801151241  
Option 2 ID : 6306801151240  
Option 3 ID : 6306801151242  
Option 4 ID : 6306801151243  
Status : Answered  
Chosen Option : 1

Q.21 Select the most appropriate synonym of the given word.  
Indigent

- Ans ☐ 1. Bust
- ☐ 2. Low
- ☒ 3. Impoverished
- ☐ 4. Affluent

Question ID : 630680377986  
Option 1 ID : 6306801473003  
Option 2 ID : 6306801473005  
Option 3 ID : 6306801473004  
Option 4 ID : 6306801473006  
Status : Answered  
Chosen Option : 3

Q.22 Select the option that can be used as a one-word substitute for the given group of words.

A person who is filled with excessive enthusiasm

- Ans
- ☒ 1. Horticulturist
  - ☒ 2. Introvert
  - ☒ 3. Narcissist
  - ☒ 4. Extrovert

Question ID : 630680414801  
Option 1 ID : 6306801617950  
Option 2 ID : 6306801617948  
Option 3 ID : 6306801617949  
Option 4 ID : 6306801617947  
Status : Answered  
Chosen Option : 4

Q.23 Select the option that rectifies the spelling error in the given sentence.  
They broght their dog to the park for a walk.

- Ans
- ☒ 1. brought
  - ☒ 2. brahgt
  - ☒ 3. bruaght
  - ☒ 4. braoght

Question ID : 630680517474  
Option 1 ID : 6306802022294  
Option 2 ID : 6306802022293  
Option 3 ID : 6306802022295  
Option 4 ID : 6306802022292  
Status : Answered  
Chosen Option : 1

Q.24 Select the most appropriate ANTONYM of the underlined word.  
Her behaviour was consistent even in challenging situations.

- Ans
- ☒ 1. Appreciative
  - ☒ 2. Standard
  - ☒ 3. Enthusiastic
  - ☒ 4. Unpredictable

Question ID : 630680401252  
Option 1 ID : 6306801564831  
Option 2 ID : 6306801564832  
Option 3 ID : 6306801564829  
Option 4 ID : 6306801564830  
Status : Answered  
Chosen Option : 4

Q.25 Select the most appropriate idiom to fill in the blank.  
She now has more than a year as minister\_\_\_\_\_.

- Ans    ☒ 1. under her belt  
         ☐ 2. on her thin ice  
         ☐ 3. in the fast lane  
         ☐ 4. down for the count

Question ID : 630680517370  
Option 1 ID : 6306802021879  
Option 2 ID : 6306802021876  
Option 3 ID : 6306802021877  
Option 4 ID : 6306802021878  
Status : Answered  
Chosen Option : 4

Q.26 Select the most appropriate meaning of the given idiom.

From cradle to grave

- Ans    ☐ 1. Buying something very cheap or very expensive  
         ☒ 2. During the whole span of one's life  
         ☐ 3. Giving directions and telling someone to follow  
         ☐ 4. To achieve something you needed

Question ID : 630680517590  
Option 1 ID : 6306802022759  
Option 2 ID : 6306802022757  
Option 3 ID : 6306802022758  
Option 4 ID : 6306802022756  
Status : Answered  
Chosen Option : 2

Q.27 Select the most appropriate option that can substitute the underlined segment in the given sentence.  
He wanted to visiting the Golden Temple in Amritsar.

- Ans    ☐ 1. wanted to be visit  
         ☐ 2. wanted to visited  
         ☐ 3. wanted to visitor  
         ☒ 4. wanted to visit

Question ID : 630680414584  
Option 1 ID : 6306801617090  
Option 2 ID : 6306801617089  
Option 3 ID : 6306801617087  
Option 4 ID : 6306801617088  
Status : Answered  
Chosen Option : 4

Q.28 Select the option that can be used as a one-word substitute for the underlined words.  
I do not like him because he always disapproves the things or opinions of others.

- Ans
- ☒ 1. is insensitive of others feelings
  - ☒ 2. is a hate monger
  - ☒ 3. is critical of others
  - ☒ 4. is jealous of other people

Question ID : 630680414579  
Option 1 ID : 6306801617068  
Option 2 ID : 6306801617070  
Option 3 ID : 6306801617069  
Option 4 ID : 6306801617067  
Status : Answered  
Chosen Option : 3

Q.29 Select the most appropriate option that can substitute the underlined segment in the given idiom.

A piece of biscuit

- Ans
- ☒ 1. pastry
  - ☒ 2. cake
  - ☒ 3. tart
  - ☒ 4. Toast

Question ID : 630680517314  
Option 1 ID : 6306802021653  
Option 2 ID : 6306802021652  
Option 3 ID : 6306802021654  
Option 4 ID : 6306802021655  
Status : Answered  
Chosen Option : 2

Q.30 Select the most appropriate meaning of the given idiom.

See eye to eye

- Ans
- ☒ 1. To agree with someone
  - ☒ 2. To ignore someone
  - ☒ 3. To get upset with something
  - ☒ 4. To do something pointless

Question ID : 630680517409  
Option 1 ID : 6306802022032  
Option 2 ID : 6306802022033  
Option 3 ID : 6306802022034  
Option 4 ID : 6306802022035  
Status : Answered  
Chosen Option : 1

Q.31 Select the most appropriate option that can substitute the underlined segment in the given sentence.

What exactly have the teachers being doing wrong?

- Ans    ☒ 1. teachers been doing  
         ☐ 2. teachers being done  
         ☐ 3. teachers are doing  
         ☐ 4. teachers have been doing

Question ID : 630680414923  
Option 1 ID : 6306801618435  
Option 2 ID : 6306801618437  
Option 3 ID : 6306801618438  
Option 4 ID : 6306801618436  
Status : Answered  
Chosen Option : 1

Q.32 Select the most appropriate meaning of the given idiom.

Chip on the shoulder

- Ans    ☐ 1. Happy  
         ☒ 2. Offended  
         ☐ 3. Emotional  
         ☐ 4. Elated

Question ID : 630680310087  
Option 1 ID : 6306801206489  
Option 2 ID : 6306801206490  
Option 3 ID : 6306801206492  
Option 4 ID : 6306801206491  
Status : Answered  
Chosen Option : 2

Q.33 Select the most appropriate ANTONYM of the underlined word.

The reports of the medical tests done are now accessible on phone.

- Ans    ☐ 1. Useless  
         ☐ 2. Free  
         ☒ 3. Restricted  
         ☐ 4. Invisible

Question ID : 630680517244  
Option 1 ID : 6306802021372  
Option 2 ID : 6306802021375  
Option 3 ID : 6306802021373  
Option 4 ID : 6306802021374  
Status : Answered  
Chosen Option : 3



Q.34 The meaning of which of the following options is 'Good luck'?

- Ans ☒ 1. Second banana  
☒ 2. All wet  
☒ 3. Hang in there  
☒ 4. Break a leg

Question ID : 630680517482  
Option 1 ID : 6306802022326  
Option 2 ID : 6306802022325  
Option 3 ID : 6306802022324  
Option 4 ID : 6306802022327  
Status : Answered  
Chosen Option : 4

Q.35 Select the most appropriate synonym of the given word.  
Unhappiness

- Ans ☒ 1. Woe  
☒ 2. Wilful  
☒ 3. Willing  
☒ 4. Wicked

Question ID : 630680295217  
Option 1 ID : 6306801148593  
Option 2 ID : 6306801148594  
Option 3 ID : 6306801148595  
Option 4 ID : 6306801148592  
Status : Answered  
Chosen Option : 1

Q.36 In the following question a statement has been given with highlighted text. You are required to replace the text with correct phrase given in the options.

His intriguing mastery of the English language allowed him to write eloquently.

- Ans ☒ 1. wellness known skill  
☒ 2. least known talent  
☒ 3. captivating expertise  
☒ 4. master

Question ID : 630680701376  
Option 1 ID : 6306802747438  
Option 2 ID : 6306802747439  
Option 3 ID : 6306802747440  
Option 4 ID : 6306802747437  
Status : Answered  
Chosen Option : 3

**Q.37** Select the most appropriate option that can substitute the underlined segment in the given sentence.  
Had I known that you were planning to visit me, I should have done all the necessary arrangements.

- Ans**    ☒ 1. I would have made  
          ☐ 2. I should have made  
          ☐ 3. I would have do  
          ☐ 4. I must have made

Question ID : 630680414516  
Option 1 ID : 6306801616826  
Option 2 ID : 6306801616823  
Option 3 ID : 6306801616825  
Option 4 ID : 6306801616824  
Status : Answered  
Chosen Option : 1

**Q.38** Select the INCORRECTLY spelt word.

- Ans**    ☒ 1. Ambiguous  
          ☐ 2. Luminous  
          ☐ 3. Gregarious  
          ☐ 4. Nostalgia

Question ID : 630680410010  
Option 1 ID : 6306801598870  
Option 2 ID : 6306801598869  
Option 3 ID : 6306801598872  
Option 4 ID : 6306801598871  
Status : Answered  
Chosen Option : 1

**Q.39** Select the most appropriate meaning of the underlined segment in the given sentence.  
I sent the agreement over for them to sign so the ball is now in their court.

- Ans**    ☐ 1. An approach that uses traditional ideas that have previously worked  
          ☐ 2. Better to be satisfied with what you have than risk losing it by trying to get something better  
          ☐ 3. A time when after which programmes for older audiences may be aired on TV  
          ☒ 4. It is time for someone to deal with a problem or make a decision, because other people have already done as much as they can

Question ID : 630680192454  
Option 1 ID : 630680746406  
Option 2 ID : 630680746408  
Option 3 ID : 630680746405  
Option 4 ID : 630680746407  
Status : Answered  
Chosen Option : 4

**Q.40** Select the most appropriate ANTONYM of the given word.  
Cowardice

- Ans    ☒ 1. Boldness  
         ☐ 2. Abundance  
         ☐ 3. Hazard  
         ☐ 4. Vigour

Question ID : 630680517311  
Option 1 ID : 6306802021641  
Option 2 ID : 6306802021640  
Option 3 ID : 6306802021643  
Option 4 ID : 6306802021642  
Status : Answered  
Chosen Option : 1

**Comprehension:**

In the following passage, some words have been deleted. Read the passage carefully and select the most appropriate option to fill in each blank.  
It was an unusual dark night. In the (1)\_\_\_\_\_ of an enjoyable dream, Jim thought he heard his dog (2)\_\_\_\_\_ loudly. He groaned and glanced (3)\_\_\_\_\_ his clock sleepily. Twelve o'clock the green fluorescent (4)\_\_\_\_\_ of his clock read. Suddenly, Jim (5)\_\_\_\_\_ hushed voices outside his house. He immediately became alert and jumped out of bed. As his parents had gone on a holiday, Jim was alone at home. He decided to look who was outside.

**SubQuestion No : 41**

**Q.41** Select the correct option to fill blank 1.

- Ans    ☒ 1. middle  
         ☐ 2. side  
         ☐ 3. between  
         ☐ 4. end

Question ID : 630680515000  
Option 1 ID : 6306802012571  
Option 2 ID : 6306802012572  
Option 3 ID : 6306802012570  
Option 4 ID : 6306802012569  
Status : Answered  
Chosen Option : 1

**Comprehension:**

In the following passage, some words have been deleted. Read the passage carefully and select the most appropriate option to fill in each blank.  
It was an unusual dark night. In the (1)\_\_\_\_\_ of an enjoyable dream, Jim thought he heard his dog (2)\_\_\_\_\_ loudly. He groaned and glanced (3)\_\_\_\_\_ his clock sleepily. Twelve o'clock the green fluorescent (4)\_\_\_\_\_ of his clock read. Suddenly, Jim (5)\_\_\_\_\_ hushed voices outside his house. He immediately became alert and jumped out of bed. As his parents had gone on a holiday, Jim was alone at home. He decided to look who was outside.

**SubQuestion No : 42**

**Q.42 Select the correct option to fill blank 2.**

- Ans ☒ 1. jumping  
☒ 2. shouting  
☒ 3. barking  
☒ 4. dancing

Question ID : 630680515001  
Option 1 ID : 6306802012575  
Option 2 ID : 6306802012576  
Option 3 ID : 6306802012574  
Option 4 ID : 6306802012573  
Status : Answered  
Chosen Option : 3

**Comprehension:**

In the following passage, some words have been deleted. Read the passage carefully and select the most appropriate option to fill in each blank.  
It was an unusual dark night. In the (1)\_\_\_\_\_ of an enjoyable dream, Jim thought he heard his dog (2)\_\_\_\_\_ loudly. He groaned and glanced (3)\_\_\_\_\_ his clock sleepily. Twelve o'clock the green fluorescent (4)\_\_\_\_\_ of his clock read. Suddenly, Jim (5)\_\_\_\_\_ hushed voices outside his house. He immediately became alert and jumped out of bed. As his parents had gone on a holiday, Jim was alone at home. He decided to look who was outside.

**SubQuestion No : 43**

**Q.43 Select the correct option to fill blank 3.**

- Ans ☒ 1. in  
☒ 2. on  
☒ 3. at  
☒ 4. upon

Question ID : 630680515002  
Option 1 ID : 6306802012580  
Option 2 ID : 6306802012579  
Option 3 ID : 6306802012577  
Option 4 ID : 6306802012578  
Status : Answered  
Chosen Option : 3

**Comprehension:**

In the following passage, some words have been deleted. Read the passage carefully and select the most appropriate option to fill in each blank.  
It was an unusual dark night. In the (1)\_\_\_\_\_ of an enjoyable dream, Jim thought he heard his dog (2)\_\_\_\_\_ loudly. He groaned and glanced (3)\_\_\_\_\_ his clock sleepily. Twelve o'clock the green fluorescent (4)\_\_\_\_\_ of his clock read. Suddenly, Jim (5)\_\_\_\_\_ hushed voices outside his house. He immediately became alert and jumped out of bed. As his parents had gone on a holiday, Jim was alone at home. He decided to look who was outside.

**SubQuestion No : 44**

**Q.44 Select the correct option to fill blank 4.**

- Ans    ☒ 1. hands  
         ☐ 2. points  
         ☐ 3. dial  
         ☐ 4. light

Question ID : 630680515003  
Option 1 ID : 6306802012583  
Option 2 ID : 6306802012582  
Option 3 ID : 6306802012584  
Option 4 ID : 6306802012581  
Status : Answered  
Chosen Option : 4

**Comprehension:**

In the following passage, some words have been deleted. Read the passage carefully and select the most appropriate option to fill in each blank.  
It was an unusual dark night. In the (1)\_\_\_\_\_ of an enjoyable dream, Jim thought he heard his dog (2)\_\_\_\_\_ loudly. He groaned and glanced (3)\_\_\_\_\_ his clock sleepily. Twelve o'clock the green fluorescent (4)\_\_\_\_\_ of his clock read. Suddenly, Jim (5)\_\_\_\_\_ hushed voices outside his house. He immediately became alert and jumped out of bed. As his parents had gone on a holiday, Jim was alone at home. He decided to look who was outside.

**SubQuestion No : 45**

**Q.45 Select the correct option to fill blank 5.**

- Ans    ☐ 1. thought  
         ☒ 2. heard  
         ☐ 3. listened  
         ☐ 4. saw

Question ID : 630680515004  
Option 1 ID : 6306802012586  
Option 2 ID : 6306802012587  
Option 3 ID : 6306802012588  
Option 4 ID : 6306802012585  
Status : Answered  
Chosen Option : 2

Comprehension:

Read the given passage and answer the questions that follow.

The story of Joanne Kathleen Rowling's near magical rise to fame is almost as well known as the characters she creates.

Rowling was constantly writing and telling stories to her younger sister Dianne. "The first story I ever wrote down was about a rabbit called Rabbit." Rowling said in an interview. "He got the measles and was visited by his friends including a giant bee called Miss Bee. And ever since Rabbit and Miss Bee, I have always wanted to be a writer, though I rarely told anyone so. However, my parents, both of whom come from impoverished backgrounds and neither of whom had been to college, took the view that my overactive imagination was an amusing personal quirk that would never pay a mortgage or secure a pension.

A writer from the age of six, with two unpublished novels in the drawer, she was stuck on a train when Harry walked into her mind fully formed. She spent the next five years constructing the plots of seven books, one for every year of his secondary school life.

Rowling says she started writing the first book, Harry Potter and the Sorcerer's Stone, in Portugal, where she was teaching English.

At first nobody wanted to publish Harry Potter. She was told that the plot was too complex. Refusing to compromise, she found a publisher.

In 1997, Rowling received her first royalty cheque. By book three, she had skyrocketed to the top of the publishing world. A row of zeros appeared on the author's bank balance and her life was turned upside down. Day and night she had journalists knocking on the unanswered door of her flat.

Rowling's quality control has become legendary, as is her obsession with accuracy. She's thrilled with Stephen Fry's taped version of the books and outraged that an Italian dust jacket showed Harry minus his glasses. "Don't they understand that the glasses are the clue to his vulnerability?"

SubQuestion No : 46

Q.46 What quality do we get to know about JK Rowling that helps her become a successful writer?

- Ans
- ☒ 1. Humility
  - ☒ 2. Perseverance
  - ☐ 3. Flexibility
  - ☐ 4. Focus

Question ID : 630680406913  
Option 1 ID : 6306801586692  
Option 2 ID : 6306801586693  
Option 3 ID : 6306801586691  
Option 4 ID : 6306801586690  
Status : Answered  
Chosen Option : 2

Comprehension:

Read the given passage and answer the questions that follow.

The story of Joanne Kathleen Rowling's near magical rise to fame is almost as well known as the characters she creates.

Rowling was constantly writing and telling stories to her younger sister Dianne. "The first story I ever wrote down was about a rabbit called Rabbit." Rowling said in an interview. "He got the measles and was visited by his friends including a giant bee called Miss Bee. And ever since Rabbit and Miss Bee, I have always wanted to be a writer, though I rarely told anyone so. However, my parents, both of whom come from impoverished backgrounds and neither of whom had been to college, took the view that my overactive imagination was an amusing personal quirk that would never pay a mortgage or secure a pension.

A writer from the age of six, with two unpublished novels in the drawer, she was stuck on a train when Harry walked into her mind fully formed. She spent the next five years constructing the plots of seven books, one for every year of his secondary school life.

Rowling says she started writing the first book, Harry Potter and the Sorcerer's Stone, in Portugal, where she was teaching English.

At first nobody wanted to publish Harry Potter. She was told that the plot was too complex. Refusing to compromise, she found a publisher.

In 1997, Rowling received her first royalty cheque. By book three, she had skyrocketed to the top of the publishing world. A row of zeros appeared on the author's bank balance and her life was turned upside down. Day and night she had journalists knocking on the unanswered door of her flat.

Rowling's quality control has become legendary, as is her obsession with accuracy. She's thrilled with Stephen Fry's taped version of the books and outraged that an Italian dust jacket showed Harry minus his glasses. "Don't they understand that the glasses are the clue to his vulnerability?"

SubQuestion No : 47

Q.47 Select an appropriate title for the passage.

- Ans
- ☒ 1. The Craft of Writing
  - ☒ 2. The Publishing Journey
  - ☒ 3. Rowling's Life
  - ☒ 4. Rowling's mystery

Question ID : 630680406909

Option 1 ID : 6306801586677

Option 2 ID : 6306801586676

Option 3 ID : 6306801586675

Option 4 ID : 6306801586674

Status : Answered

Chosen Option : 3

Comprehension:

Read the given passage and answer the questions that follow.

The story of Joanne Kathleen Rowling's near magical rise to fame is almost as well known as the characters she creates.

Rowling was constantly writing and telling stories to her younger sister Dianne. "The first story I ever wrote down was about a rabbit called Rabbit." Rowling said in an interview. "He got the measles and was visited by his friends including a giant bee called Miss Bee. And ever since Rabbit and Miss Bee, I have always wanted to be a writer, though I rarely told anyone so. However, my parents, both of whom come from impoverished backgrounds and neither of whom had been to college, took the view that my overactive imagination was an amusing personal quirk that would never pay a mortgage or secure a pension.

A writer from the age of six, with two unpublished novels in the drawer, she was stuck on a train when Harry walked into her mind fully formed. She spent the next five years constructing the plots of seven books, one for every year of his secondary school life.

Rowling says she started writing the first book, Harry Potter and the Sorcerer's Stone, in Portugal, where she was teaching English.

At first nobody wanted to publish Harry Potter. She was told that the plot was too complex. Refusing to compromise, she found a publisher.

In 1997, Rowling received her first royalty cheque. By book three, she had skyrocketed to the top of the publishing world. A row of zeros appeared on the author's bank balance and her life was turned upside down. Day and night she had journalists knocking on the unanswered door of her flat.

Rowling's quality control has become legendary, as is her obsession with accuracy. She's thrilled with Stephen Fry's taped version of the books and outraged that an Italian dust jacket showed Harry minus his glasses. "Don't they understand that the glasses are the clue to his vulnerability?"

SubQuestion No : 48

Q.48 What was Rowling doing when she started writing Harry Potter and the Sorcerer's Stone?

- Ans
- ☒ 1. Designing
  - ☒ 2. Writing full-time
  - ☒ 3. Teaching
  - ☒ 4. Accounting

Question ID : 630680406910  
Option 1 ID : 6306801586681  
Option 2 ID : 6306801586678  
Option 3 ID : 6306801586679  
Option 4 ID : 6306801586680  
Status : Answered  
Chosen Option : 3



Comprehension:

Read the given passage and answer the questions that follow.

The story of Joanne Kathleen Rowling's near magical rise to fame is almost as well known as the characters she creates.

Rowling was constantly writing and telling stories to her younger sister Dianne. "The first story I ever wrote down was about a rabbit called Rabbit." Rowling said in an interview. "He got the measles and was visited by his friends including a giant bee called Miss Bee. And ever since Rabbit and Miss Bee, I have always wanted to be a writer, though I rarely told anyone so. However, my parents, both of whom come from impoverished backgrounds and neither of whom had been to college, took the view that my overactive imagination was an amusing personal quirk that would never pay a mortgage or secure a pension.

A writer from the age of six, with two unpublished novels in the drawer, she was stuck on a train when Harry walked into her mind fully formed. She spent the next five years constructing the plots of seven books, one for every year of his secondary school life.

Rowling says she started writing the first book, Harry Potter and the Sorcerer's Stone, in Portugal, where she was teaching English.

At first nobody wanted to publish Harry Potter. She was told that the plot was too complex. Refusing to compromise, she found a publisher.

In 1997, Rowling received her first royalty cheque. By book three, she had skyrocketed to the top of the publishing world. A row of zeros appeared on the author's bank balance and her life was turned upside down. Day and night she had journalists knocking on the unanswered door of her flat.

Rowling's quality control has become legendary, as is her obsession with accuracy. She's thrilled with Stephen Fry's taped version of the books and outraged that an Italian dust jacket showed Harry minus his glasses. "Don't they understand that the glasses are the clue to his vulnerability?"

SubQuestion No : 49

Q.49 Select the word from the passage that is the ANTONYM for 'conformity'.

- Ans
- ☒ 1. Constantly
  - ☒ 2. Secure
  - ☒ 3. Amusing
  - ☒ 4. Quirky

Question ID : 630680406912

Option 1 ID : 6306801586686

Option 2 ID : 6306801586688

Option 3 ID : 6306801586687

Option 4 ID : 6306801586689

Status : Answered

Chosen Option : 4

Comprehension:

Read the given passage and answer the questions that follow.

The story of Joanne Kathleen Rowling's near magical rise to fame is almost as well known as the characters she creates.

Rowling was constantly writing and telling stories to her younger sister Dianne. "The first story I ever wrote down was about a rabbit called Rabbit." Rowling said in an interview. "He got the measles and was visited by his friends including a giant bee called Miss Bee. And ever since Rabbit and Miss Bee, I have always wanted to be a writer, though I rarely told anyone so. However, my parents, both of whom come from impoverished backgrounds and neither of whom had been to college, took the view that my overactive imagination was an amusing personal quirk that would never pay a mortgage or secure a pension.

A writer from the age of six, with two unpublished novels in the drawer, she was stuck on a train when Harry walked into her mind fully formed. She spent the next five years constructing the plots of seven books, one for every year of his secondary school life.

Rowling says she started writing the first book, Harry Potter and the Sorcerer's Stone, in Portugal, where she was teaching English.

At first nobody wanted to publish Harry Potter. She was told that the plot was too complex. Refusing to compromise, she found a publisher.

In 1997, Rowling received her first royalty cheque. By book three, she had skyrocketed to the top of the publishing world. A row of zeros appeared on the author's bank balance and her life was turned upside down. Day and night she had journalists knocking on the unanswered door of her flat.

Rowling's quality control has become legendary, as is her obsession with accuracy. She's thrilled with Stephen Fry's taped version of the books and outraged that an Italian dust jacket showed Harry minus his glasses. "Don't they understand that the glasses are the clue to his vulnerability?"

SubQuestion No : 50

Q.50 What is the tone of the passage?

- Ans
- ☒ 1. Anxious
  - ☒ 2. Gloomy
  - ☒ 3. Informative
  - ☒ 4. Mystical

Question ID : 630680406911

Option 1 ID : 6306801586685

Option 2 ID : 6306801586684

Option 3 ID : 6306801586682

Option 4 ID : 6306801586683

Status : Answered

Chosen Option : 3