

Sub Inspector in Delhi Police and Central Armed Police Forces Examination 2024 Paper I  
Exam

Roll Number	
Candidate Name	
Venue Name	
Exam Date	29/06/2024
Exam Time	12:30 PM - 2:30 PM
Subject	SICPO Paper I 2024

Section : General Intelligence and Reasoning

Q.1 From his office, Mukesh went 12 km straight. Then he turned 45° right and covered 8 km. From here he turned left and travelled 7 km and finally turning left he covered 11 km. If he was going north-west at last, then in which direction did he start from his office?

- Ans ☒ 1. East  
☒ 2. South  
☒ 3. West  
☒ 4. North

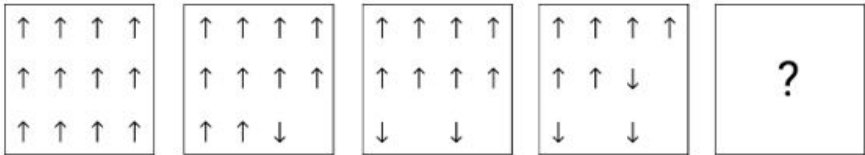
Question ID : 630680113411  
Option 1 ID : 630680439186  
Option 2 ID : 630680439189  
Option 3 ID : 630680439188  
Option 4 ID : 630680439187  
Status : Not Answered  
Chosen Option : --

Q.2 Which of the following numbers will replace the question mark (?) in the given series?  
46, ?, 81, 100, 120, 141

- Ans ☒ 1. 59  
☒ 2. 61  
☒ 3. 63  
☒ 4. 66

Question ID : 630680411953  
Option 1 ID : 6306801606648  
Option 2 ID : 6306801606647  
Option 3 ID : 6306801606650  
Option 4 ID : 6306801606649  
Status : Answered  
Chosen Option : 3

Q.3 Identify the figure given in the options which when put in place of '?' will logically complete the series.



Ans

- ✓ 1.

↑ ↑ ↑ ↑

↓   ↓

↓   ↓
- ✗ 2.

↑ ↑ ↑ ↑

↓   ↓

↓
- ✗ 3.

↑ ↑ ↑ ↑

↓

↓ ↓ ↓
- ✗ 4.

↑ ↑ ↑ ↑

↓

↓   ↓

Question ID : 630680366163  
Option 1 ID : 6306801426177  
Option 2 ID : 6306801426178  
Option 3 ID : 6306801426180  
Option 4 ID : 6306801426179  
Status : Answered  
Chosen Option : 1

Q.4 Which of the following terms will replace the question mark (?) in the given series?

GXMA, IVOY, KTQW, MRSU, ?

- ✗ 1. OQVS
- ✗ 2. OQUT
- ✓ 3. OPUS
- ✗ 4. OPVS

Question ID : 630680417046  
Option 1 ID : 6306801626950  
Option 2 ID : 6306801626948  
Option 3 ID : 6306801626949  
Option 4 ID : 6306801626947  
Status : Answered  
Chosen Option : 3

Q.5 Which of the following numbers will replace the question mark (?) in the given series?

8      9      13      22      ?

- Ans
- ☒ 1. 42
  - ☒ 2. 48
  - ☒ 3. 32
  - ☒ 4. 38

Question ID : 630680412014  
Option 1 ID : 6306801606892  
Option 2 ID : 6306801606891  
Option 3 ID : 6306801606893  
Option 4 ID : 6306801606894  
Status : Answered  
Chosen Option : 4

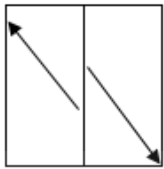
Q.6 Select the option that represents the correct order of the given words as they would appear in an English dictionary.

- 1. Purposively
- 2. Pursuit
- 3. Purgatory
- 4. Purify
- 5. Purports
- 6. Purchased

- Ans
- ☒ 1. 6, 3, 1, 5, 4, 2
  - ☒ 2. 6, 3, 4, 5, 1, 2
  - ☒ 3. 4, 5, 3, 1, 6, 2
  - ☒ 4. 4, 5, 6, 3, 1, 2

Question ID : 630680417406  
Option 1 ID : 6306801628389  
Option 2 ID : 6306801628388  
Option 3 ID : 6306801628390  
Option 4 ID : 6306801628387  
Status : Answered  
Chosen Option : 2

Q.7 A transparent sheet with a pattern is given below. Select the option that depicts the pattern that would appear when the given transparent sheet is folded at the middle vertical line.



Ans

- ✓ 1.
- ✗ 2.
- ✗ 3.
- ✗ 4.

Question ID : 630680389402  
Option 1 ID : 6306801518066  
Option 2 ID : 6306801518067  
Option 3 ID : 6306801518069  
Option 4 ID : 6306801518068  
Status : Answered  
Chosen Option : 1

Q.8 In a certain code language, 'FROM' is written as 'HSNK' and 'WAKE' is written as 'YBJC'. How will 'JUMP' be written in the given language?

- ✓ 1. LVLN
- ✗ 2. LTKN
- ✗ 3. MTKN
- ✗ 4. MULM

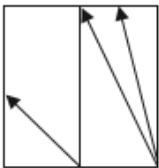
Question ID : 630680313752  
Option 1 ID : 6306801220850  
Option 2 ID : 6306801220849  
Option 3 ID : 6306801220851  
Option 4 ID : 6306801220852  
Status : Answered  
Chosen Option : 1

Q.9 Which letter cluster can replace the question mark (?) to complete the given series?  
UBIG, PDKL, ?, FHOV, AJQA

- Ans
- ☒ 1. LEMR
  - ☒ 2. JEMQ
  - ☒ 3. KEMR
  - ☒ 4. KFMQ

Question ID : 630680416308  
Option 1 ID : 6306801623996  
Option 2 ID : 6306801623998  
Option 3 ID : 6306801623995  
Option 4 ID : 6306801623997  
Status : Answered  
Chosen Option : 4

Q.10 A transparent sheet with a pattern is given below. Select the option that depicts the pattern that would appear when the given transparent sheet is folded at the middle vertical line.



Ans

- ☒ 1.
- ☒ 2.
- ☒ 3.
- ☒ 4.

Question ID : 630680389406  
Option 1 ID : 6306801518084  
Option 2 ID : 6306801518085  
Option 3 ID : 6306801518082  
Option 4 ID : 6306801518083  
Status : Answered  
Chosen Option : 1

Q.11 What will come in place of the question mark (?) when + and – are interchanged?  
 $8 - 3 \times 4 + 16 \div 2 = ?$

Ans ☒ 1. 12

☐ 2. 11

☐ 3. 10

☐ 4. 14

Question ID : 630680411790

Option 1 ID : 6306801605996

Option 2 ID : 6306801605998

Option 3 ID : 6306801605995

Option 4 ID : 6306801605997

Status : Answered

Chosen Option : 1

Q.12 Select the option that is related to the fifth term in the same way as the second term is related to the first term and the fourth term is related to the third term.  
DRIVE : RDEVI :: STOCK : TSKCO :: MOULD : ?

Ans ☒ 1. OMDLU

☐ 2. MODLU

☐ 3. OMULD

☐ 4. OMLUD

Question ID : 630680416788

Option 1 ID : 6306801625916

Option 2 ID : 6306801625917

Option 3 ID : 6306801625915

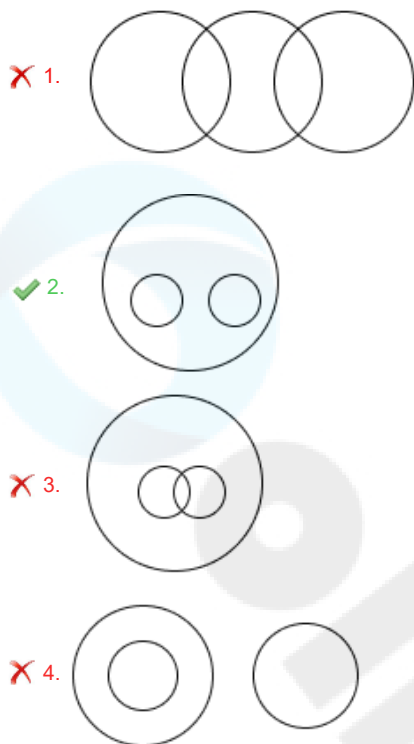
Option 4 ID : 6306801625918

Status : Answered

Chosen Option : 1

Q.13 Select the Venn diagram that best illustrates the relationship between the following classes.  
Animals, Lions, Jackals

Ans



Question ID : 630680869732  
Option 1 ID : 6306803406295  
Option 2 ID : 6306803406294  
Option 3 ID : 6306803406296  
Option 4 ID : 6306803406297  
Status : Answered  
Chosen Option : 2

Q.14 Select the set in which the numbers are related in the same way as are the numbers of the following sets.

(NOTE: Operations should be performed on the whole numbers, without breaking down the numbers into its constituent digits. E.g. 13 – Operations on 13 such as adding /deleting /multiplying etc. to 13 can be performed. Breaking down 13 into 1 and 3 and then performing mathematical operations on 1 and 3 is not allowed)

(84, 28, 4)  
(147, 49, 7)

- Ans ✓ 1. (231, 77, 11)  
✗ 2. (231, 77, 13)  
✗ 3. (241, 77, 11)  
✗ 4. (231, 67, 11)

Question ID : 630680344678  
Option 1 ID : 6306801341023  
Option 2 ID : 6306801341021  
Option 3 ID : 6306801341024  
Option 4 ID : 6306801341022  
Status : Answered  
Chosen Option : 1

Q.15 In a code language, 'COOL' is coded as '180' and 'MAN' is coded as '84'. How will 'QUIET' be coded in the same language?

Ans ☒ 1. 36

☒ 2. 360

☒ 3. 56

☒ 4. 284

Question ID : 630680302859

Option 1 ID : 6306801178100

Option 2 ID : 6306801178099

Option 3 ID : 6306801178098

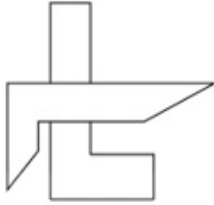
Option 4 ID : 6306801178101

Status : Answered

Chosen Option : 2

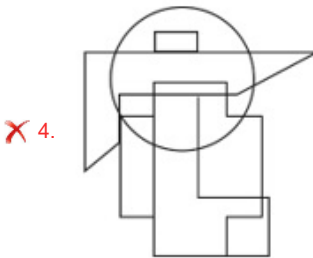
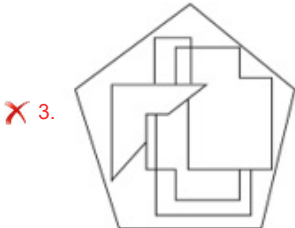
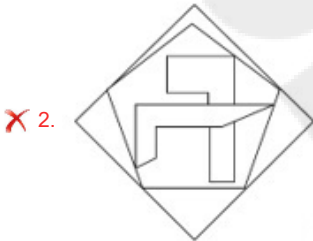
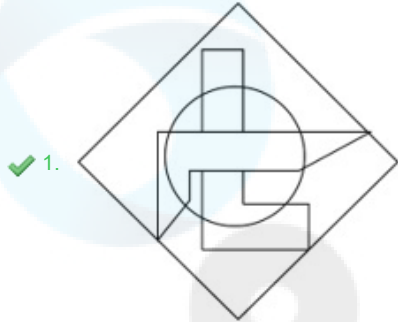


Q.16 Select the option in which the given figure (X) is embedded as its part. (Rotation is NOT allowed.)



X

Ans



Question ID : 630680305496

Option 1 ID : 6306801188361

Option 2 ID : 6306801188364

Option 3 ID : 6306801188363

Option 4 ID : 6306801188362

Status : Answered

Chosen Option : 1

Q.17 If 'A' stands for '+', 'B' stands for 'x', 'C' stands for '+' and 'D' stands for '-', what will come in place of the question mark (?) in the following equation?  
96 A 4 D 5 B 7 C 20 = ?

Ans ☒ 1. 9

☐ 2. 2

☐ 3. 4

☐ 4. 7

Question ID : 630680411670

Option 1 ID : 6306801605518

Option 2 ID : 6306801605515

Option 3 ID : 6306801605517

Option 4 ID : 6306801605516

Status : Answered

Chosen Option : 1

Q.18 Select the set in which the numbers are related in the same way as are the numbers of the following sets.

(NOTE: Operations should be performed on the whole numbers, without breaking down the numbers into its constituent digits. E.g. 13 – Operations on 13 such as adding /deleting /multiplying etc. to 13 can be performed. Breaking down 13 into 1 and 3 and then performing mathematical operations on 1 and 3 is not allowed)

(21, 63, 378)

(23, 69, 414)

Ans ☐ 1. (26, 81, 486)

☒ 2. (27, 81, 486)

☐ 3. (27, 80, 486)

☐ 4. (27, 81, 476)

Question ID : 630680344669

Option 1 ID : 6306801340988

Option 2 ID : 6306801340987

Option 3 ID : 6306801340986

Option 4 ID : 6306801340985

Status : Answered

Chosen Option : 2

Q.19 Based on the English alphabetical order, three of the following four letter-clusters are alike in a certain way and thus form a group. Which letter-cluster does not belong to that group?

(Note: The odd letter-cluster is not based on the number of consonants/vowels or their position in the letter-cluster.)

Ans ☐ 1. SWT

☒ 2. QUS

☐ 3. OSP

☐ 4. UYV

Question ID : 630680416091

Option 1 ID : 6306801623128

Option 2 ID : 6306801623129

Option 3 ID : 6306801623130

Option 4 ID : 6306801623127

Status : Answered

Chosen Option : 2

Q.20 Which of the following numbers will replace the question mark (?) in the given series?  
101, 103, 107, 109, ?, 127, 131, 137

- Ans
- ☐ 1. 125
  - ☐ 2. 111
  - ☐ 3. 123
  - ☒ 4. 113

Question ID : 630680411869  
Option 1 ID : 6306801606311  
Option 2 ID : 6306801606313  
Option 3 ID : 6306801606312  
Option 4 ID : 6306801606314  
Status : Not Answered  
Chosen Option : --

Q.21 In a certain code language, 'SING' is written as '22121710' and 'FOUR' is written as '9182421'. How will 'BEAN' be written in that language?

- Ans
- ☐ 1. 68418
  - ☒ 2. 58417
  - ☐ 3. 57413
  - ☐ 4. 69516

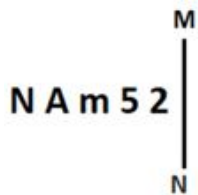
Question ID : 630680416594  
Option 1 ID : 6306801625140  
Option 2 ID : 6306801625142  
Option 3 ID : 6306801625139  
Option 4 ID : 6306801625141  
Status : Marked For Review  
Chosen Option : 2

Q.22 Select the option that is related to the third word in the same way as the second word is related to the first word. (The words must be considered as meaningful English words and must not be related to each other based on the number of letters/number of consonants/vowels in the word.)  
Concology : Shells :: Palaeontology : ?

- Ans
- ☐ 1. Metals
  - ☒ 2. Fossils
  - ☐ 3. Planets
  - ☐ 4. Soil

Question ID : 630680416725  
Option 1 ID : 6306801625664  
Option 2 ID : 6306801625666  
Option 3 ID : 6306801625665  
Option 4 ID : 6306801625663  
Status : Marked For Review  
Chosen Option : 2

Q.23 Select the correct mirror image of the given figure when the mirror is placed at MN as shown below.



- Ans
- ✓ 1. 2 5 m A N
  - ✗ 2. 5 2 m A N
  - ✗ 3. 2 5 m A N
  - ✗ 4. 2 5 m A N

Question ID : 630680356650

Option 1 ID : 6306801388601

Option 2 ID : 6306801388604

Option 3 ID : 6306801388603

Option 4 ID : 6306801388602

Status : Answered

Chosen Option : 1

Q.24 9 is related to 90 following a certain logic. Following the same logic, 12 is related to 156. Which of the following numbers is related to 72 using the same logic?

- Ans
- ✗ 1. 6
  - ✗ 2. 9
  - ✗ 3. 7
  - ✓ 4. 8

Question ID : 63068063340

Option 1 ID : 630680244526

Option 2 ID : 630680244529

Option 3 ID : 630680244527

Option 4 ID : 630680244528

Status : Answered

Chosen Option : 4

Q.25 In a certain code language,  
'A x B' means 'A is the son of B',  
'A - B' means 'A is the brother of B',  
'A + B' means 'A is the wife of B',  
'A % B' means 'A is the father of B'.

How is M related to T if 'M + N - P x S % T'?

- Ans
- ✗ 1. Mother's brother's daughter
  - ✓ 2. Brother's wife
  - ✗ 3. Father's brother's son's wife
  - ✗ 4. Wife's sister

Question ID : 630680869741

Option 1 ID : 6306803406332

Option 2 ID : 6306803406333

Option 3 ID : 6306803406330

Option 4 ID : 6306803406331

Status : Answered

Chosen Option : 2

Q.26 What will come in place of the question mark (?) in the following equation, if '+' and '-' are interchanged and 'x' and '÷' are interchanged?  
 $76 \div 6 + 18 \times 6 - 49 = ?$

Ans ☒ 1. 524

☒ 2. 569

☒ 3. 596

☒ 4. 502

Question ID : 630680411739

Option 1 ID : 6306801605793

Option 2 ID : 6306801605794

Option 3 ID : 6306801605791

Option 4 ID : 6306801605792

Status : Marked For Review

Chosen Option : 4

Q.27 Which of the following terms will replace the question mark (?) in the given series?

NBRY, PZSX, ?, TVUV, VTVU

Ans ☒ 1. SYTW

☒ 2. SXTW

☒ 3. RYTW

☒ 4. RXTW

Question ID : 630680417047

Option 1 ID : 6306801626954

Option 2 ID : 6306801626953

Option 3 ID : 6306801626951

Option 4 ID : 6306801626952

Status : Answered

Chosen Option : 4

Q.28 Select the figure from among the given options that can logically replace the question mark (?) in the following series.

q                      c α %                      a	%                      α q a                      c	a                      q % c                      α	c                      % a α                      q	?
---	---	---	---	---

Ans

✗ 1.

%                      q α c                      a
---

✗ 2.

c                      α % a                      q
---

✓ 3.

α                      a c q                      %
---

✗ 4.

α                      a q %                      c
---

Question ID : 630680867755

Option 1 ID : 6306803398666

Option 2 ID : 6306803398665

Option 3 ID : 6306803398664

Option 4 ID : 6306803398667

Status : Answered

Chosen Option : 3

Q.29 Select the set in which the numbers are related in the same way as are the numbers of the given sets.

(NOTE: Operations should be performed on the whole numbers, without breaking down the numbers into its constituent digits. E.g. 13 – Operations on 13 such as adding/deleting/multiplying, etc. to 13 can be performed. Breaking down 13 into 1 and 3 and then performing mathematical operations on 1 and 3 is not allowed.)

(18, 3, 9)

(36, 6, 18)

Ans ☒ 1. (72, 13, 36)

☒ 2. (78, 13, 39)

☒ 3. (72, 14, 39)

☒ 4. (78, 14, 39)

Question ID : 630680294011

Option 1 ID : 6306801143857

Option 2 ID : 6306801143858

Option 3 ID : 6306801143856

Option 4 ID : 6306801143859

Status : Answered

Chosen Option : 2

Q.30 If + means  $\div$ ,  $\div$  means  $\times$ ,  $\times$  means  $+$ , and  $\div$  means  $\times$ , what will be the value of the following expression?

$16 \times 9 + 5 \div 4 - 2 = ?$

Ans ☒ 1. 20

☒ 2. 15

☒ 3. 40

☒ 4. 35

Question ID : 630680411961

Option 1 ID : 6306801606682

Option 2 ID : 6306801606680

Option 3 ID : 6306801606679

Option 4 ID : 6306801606681

Status : Answered

Chosen Option : 2

Q.31 In a code language, 'CRAB' is written as 'YTWD', and 'CALM' is written as 'YCHO'. How will 'ZOOM' be written in that language?

Ans ☒ 1. VKOQ

☒ 2. KVOQ

☒ 3. KOVQ

☒ 4. VQKO

Question ID : 630680416677

Option 1 ID : 6306801625471

Option 2 ID : 6306801625474

Option 3 ID : 6306801625472

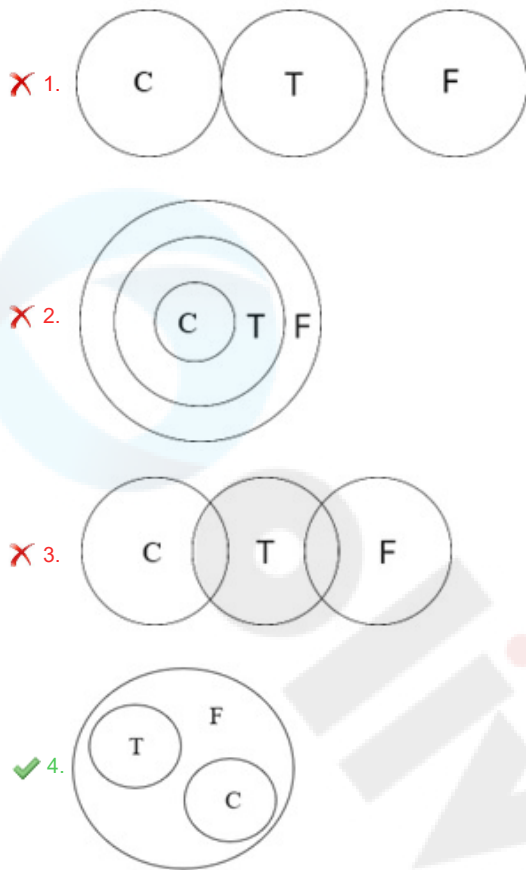
Option 4 ID : 6306801625473

Status : Answered

Chosen Option : 4

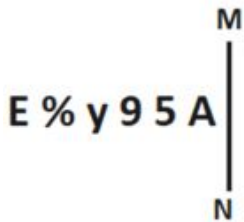
Q.32 Select the Venn diagram that best illustrates the relationship between the following classes.  
Furniture, Chair, Table

Ans




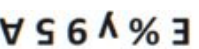


Question ID : 630680416274  
Option 1 ID : 6306801623862  
Option 2 ID : 6306801623860  
Option 3 ID : 6306801623861  
Option 4 ID : 6306801623859  
Status : Answered  
Chosen Option : 4

Q.33 Select the correct mirror image of the given figure when the mirror is placed at MN as shown below.



Ans

- ✗ 1. 
- ✓ 2. 
- ✗ 3. 
- ✗ 4. 

Question ID : 630680356644  
Option 1 ID : 6306801388580  
Option 2 ID : 6306801388577  
Option 3 ID : 6306801388578  
Option 4 ID : 6306801388579  
Status : Answered  
Chosen Option : 2



Q.34 In a code language, 'BEST' is written as 'GKXZ', and 'EDGE' is written as 'JCLK'. How will 'WIND' be written in that language?

- Ans    ☒ 1. BOSJ  
         ☐ 2. SJBO  
         ☐ 3. BSJO  
         ☐ 4. JSOB

Question ID : 630680416692  
Option 1 ID : 6306801625533  
Option 2 ID : 6306801625531  
Option 3 ID : 6306801625534  
Option 4 ID : 6306801625532  
Status : Answered  
Chosen Option : 1

Q.35 A, B, C, D, E and F are sitting around a circular table facing the centre. Only two people sit between A and F. Only one person sits between F and E. C sits to the immediate left of D. C is not an immediate neighbour of A. Who is sitting to the immediate left of F?

- Ans    ☐ 1. E  
         ☐ 2. A  
         ☐ 3. D  
         ☒ 4. B

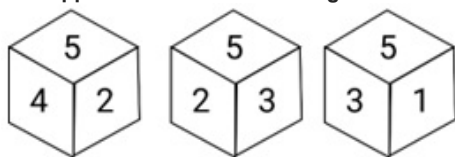
Question ID : 630680416854  
Option 1 ID : 6306801626181  
Option 2 ID : 6306801626179  
Option 3 ID : 6306801626182  
Option 4 ID : 6306801626180  
Status : Answered  
Chosen Option : 4

Q.36 Select the number from among the given options that can replace the question mark (?) in the following series.  
228, 209, 192, 179, 168, ?

- Ans    ☐ 1. 162  
         ☐ 2. 160  
         ☐ 3. 165  
         ☒ 4. 161

Question ID : 630680411931  
Option 1 ID : 6306801606559  
Option 2 ID : 6306801606562  
Option 3 ID : 6306801606561  
Option 4 ID : 6306801606560  
Status : Not Answered  
Chosen Option : --

Q.37 Three different positions of the same die are shown below. Find the number on the face opposite to the face showing '1'.



- Ans
- ☒ 1. 5
  - ☒ 2. 3
  - ☒ 3. 6
  - ☒ 4. 2

Question ID : 630680318733  
Option 1 ID : 6306801239938  
Option 2 ID : 6306801239940  
Option 3 ID : 6306801239939  
Option 4 ID : 6306801239937  
Status : Answered  
Chosen Option : 4

Q.38 Point B is 35 m to the east of Point A. Point C is 26 m to the north of Point A. Point C is 15 m to the west of Point D. Point E is 13 m to the south of Point D. Point F is 20 m to the east of Point E. In which direction is Point B with respect to Point F?

- Ans
- ☒ 1. South
  - ☒ 2. South-east
  - ☒ 3. West
  - ☒ 4. North-west

Question ID : 630680416357  
Option 1 ID : 6306801624192  
Option 2 ID : 6306801624193  
Option 3 ID : 6306801624194  
Option 4 ID : 6306801624191  
Status : Answered  
Chosen Option : 1

Q.39 Which two signs should be interchanged to make the given equation correct?  
 $7 \div 255 + 5 \times 3 - 20 = 140$

- Ans
- ☒ 1.  $-$  and  $\div$
  - ☒ 2.  $+$  and  $\div$
  - ☒ 3.  $\times$  and  $+$
  - ☒ 4.  $+$  and  $-$

Question ID : 630680411798  
Option 1 ID : 6306801606027  
Option 2 ID : 6306801606030  
Option 3 ID : 6306801606029  
Option 4 ID : 6306801606028  
Status : Marked For Review  
Chosen Option : 2

**Q.40** In a certain code language, 'BEDROOM' is written as '28' and 'MOON' is written as '16'.  
How will 'CHAIN' be written in that language?

Ans ☒ 1. 20

☒ 2. 26

☒ 3. 24

☒ 4. 23

Question ID : 630680416592

Option 1 ID : 6306801625133

Option 2 ID : 6306801625134

Option 3 ID : 6306801625132

Option 4 ID : 6306801625131

Status : Answered

Chosen Option : 1

**Q.41** If 'A' stands for '+', 'B' stands for '-', 'C' stands for 'x' and 'D' stands for '÷', what will  
come in place of the question mark (?) in the following equation?  
80 B 12 C 5 A 27 D 9 = ?

Ans ☒ 1. 19

☒ 2. 25

☒ 3. 23

☒ 4. 27

Question ID : 630680411666

Option 1 ID : 6306801605499

Option 2 ID : 6306801605501

Option 3 ID : 6306801605500

Option 4 ID : 6306801605502

Status : Answered

Chosen Option : 3

**Q.42** Two statements are given followed by two conclusions numbered I and II. Assuming  
the statements to be true, even if they seem to be at variance with commonly known  
facts, decide which of the conclusions logically follow(s) from the statements.

Statements:

No plate is a bowl.

All plates are tumblers.

Conclusions:

I. No tumbler is a plate.

II. Some tumblers are bowls.

Ans ☒ 1. Only conclusion I follows

☒ 2. Only conclusion II follows

☒ 3. Either conclusion I or II follows

☒ 4. Neither conclusion I nor II follows

Question ID : 630680416891

Option 1 ID : 6306801626327

Option 2 ID : 6306801626328

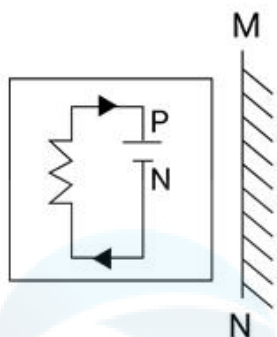
Option 3 ID : 6306801626329

Option 4 ID : 6306801626330

Status : Answered

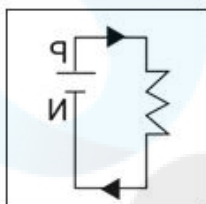
Chosen Option : 4

Q.43 Select the correct mirror image of the given figure when the mirror is placed at MN as shown below.

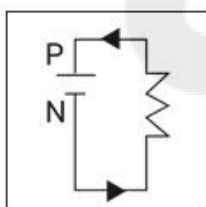


Ans

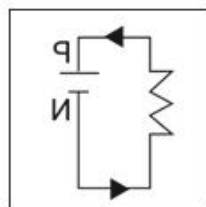
✗ 1.



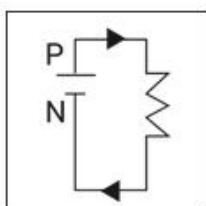
✗ 2.



✓ 3.



✗ 4.



Question ID : 630680296901

Option 1 ID : 6306801155250

Option 2 ID : 6306801155247

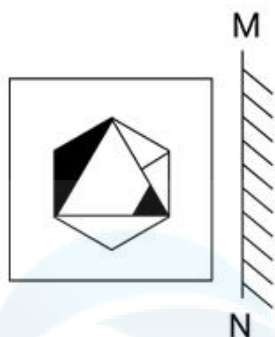
Option 3 ID : 6306801155249

Option 4 ID : 6306801155248

Status : Answered

Chosen Option : 3

Q.44 Select the correct mirror image of the given figure when the mirror is placed at MN as shown below.

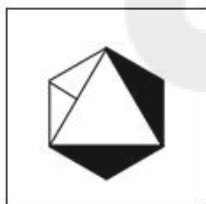


Ans

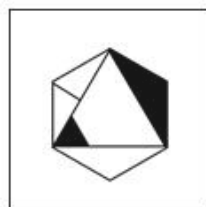
✗ 1.



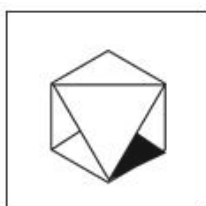
✗ 2.



✓ 3.



✗ 4.



Question ID : 630680296906

Option 1 ID : 6306801155267

Option 2 ID : 6306801155270

Option 3 ID : 6306801155268

Option 4 ID : 6306801155269

Status : Answered

Chosen Option : 3

Q.45 What will come in the place of '?' in the following equation, if '+' and '-' are interchanged and also 'x' and '÷' are interchanged?  
 $11 \div 12 - 78 \times 6 + 54 = ?$

Ans ☒ 1. 104

☒ 2. 91

☒ 3. 86

☒ 4. 99

Question ID : 630680343177

Option 1 ID : 6306801335082

Option 2 ID : 6306801335081

Option 3 ID : 6306801335083

Option 4 ID : 6306801335084

Status : Answered

Chosen Option : 2

Q.46 Select the option that represents the correct order of the given words as they would appear in an English dictionary?

1. Unfaithful
2. Unfamiliar
3. Uneasiness
4. Undone
5. Understand
6. Undetermined

Ans ☒ 1. 5, 6, 4, 3, 2, 1

☒ 2. 5, 6, 4, 3, 1, 2

☒ 3. 5, 6, 4, 2, 1, 3

☒ 4. 5, 6, 1, 2, 4, 3

Question ID : 630680417390

Option 1 ID : 6306801628323

Option 2 ID : 6306801628325

Option 3 ID : 6306801628324

Option 4 ID : 6306801628326

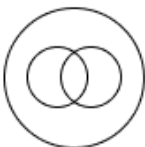
Status : Answered

Chosen Option : 2

Q.47 उस वेन आरेख का चयन कीजिए जो निम्नलिखित वर्गों के बीच संबंध को सर्वोत्तम रूप से दर्शाता है।  
महिला, माँ, अभिनेता

Ans

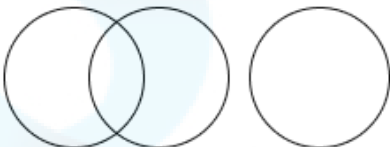
✗ 1.



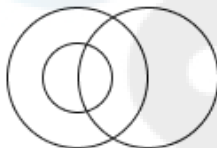
✗ 2.



✗ 3.



✓ 4.



Question ID : 630680869739

Option 1 ID : 6306803406323

Option 2 ID : 6306803406324

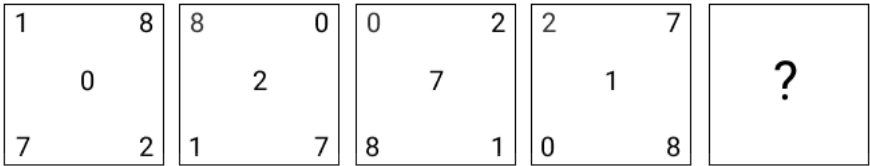
Option 3 ID : 6306803406322

Option 4 ID : 6306803406325

Status : Answered

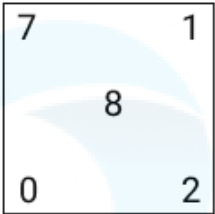
Chosen Option : 3

Q.48 Identify the figure given in the options, which when put in place of the question mark (?) will logically complete the series.

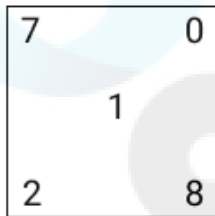


Ans

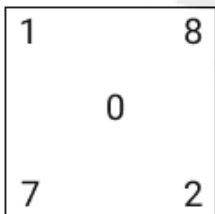
✗ 1.



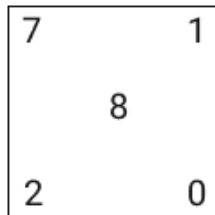
✗ 2.



✗ 3.



✓ 4.



Question ID : 630680867773

Option 1 ID : 6306803398737

Option 2 ID : 6306803398739

Option 3 ID : 6306803398738

Option 4 ID : 6306803398736

Status : Answered

Chosen Option : 4



**Q.49** Select the set in which the numbers are related in the same way as are the numbers of the following sets.  
(NOTE : Operations should be performed on the whole numbers, without breaking down the numbers into its constituent digits. E.g. 13 – Operations on 13 such as adding /deleting /multiplying etc. to 13 can be performed. Breaking down 13 into 1 and 3 and then performing mathematical operations on 1 and 3 is not allowed.)  
(16, 20, 80)  
(12, 16, 64)

- Ans ☒ 1. (20, 25, 100)  
☒ 2. (18, 22, 88)  
☒ 3. (19, 23, 82)  
☒ 4. (11, 15, 70)

Question ID : 630680340903  
Option 1 ID : 6306801326054  
Option 2 ID : 6306801326056  
Option 3 ID : 6306801326055  
Option 4 ID : 6306801326053  
Status : Answered  
Chosen Option : 2

**Q.50** In a certain code language,  
A + B means 'A is the mother of B'  
A – B means 'A is the brother of B'  
A × B means 'A is the wife of B'  
A ÷ B means 'A is the father of B'  
Based on the above, how is T related to Q if 'P – Q + R – S ÷ T × U'?

- Ans ☒ 1. Wife's sister  
☒ 2. Daughter's daughter  
☒ 3. Son's daughter  
☒ 4. Sister

Question ID : 630680284953  
Option 1 ID : 6306801107811  
Option 2 ID : 6306801107813  
Option 3 ID : 6306801107812  
Option 4 ID : 6306801107814  
Status : Answered  
Chosen Option : 3

Section : General Knowledge and General Awareness

**Q.1** Which Union Territory has the lowest literacy rate, according to the Census of India 2011?

- Ans ☒ 1. Lakshadweep  
☒ 2. Dadra and Nagar Haveli  
☒ 3. Andaman and Nicobar Islands  
☒ 4. Delhi

Question ID : 630680112002  
Option 1 ID : 630680433734  
Option 2 ID : 630680433735  
Option 3 ID : 630680433736  
Option 4 ID : 630680433737  
Status : Answered  
Chosen Option : 2

Q.2 Ugadi is celebrated primarily in which of the following states on the first day of the Chaitra month of the Hindu calendar?

- Ans
- ☒ 1. Odisha
  - ☒ 2. Karnataka
  - ☒ 3. Uttarakhand
  - ☒ 4. Assam

Question ID : 630680410362  
Option 1 ID : 6306801600179  
Option 2 ID : 6306801600180  
Option 3 ID : 6306801600182  
Option 4 ID : 6306801600181  
Status : Answered  
Chosen Option : 2

Q.3 One term for the continuous movement of water through the lithosphere, atmosphere and hydrosphere is:

- Ans
- ☒ 1. hydrological cycle
  - ☒ 2. hydro equilibrium cycle
  - ☒ 3. hydrostatical equilibrium
  - ☒ 4. water circulation

Question ID : 630680210495  
Option 1 ID : 630680816140  
Option 2 ID : 630680816142  
Option 3 ID : 630680816141  
Option 4 ID : 630680816139  
Status : Not Answered  
Chosen Option : --

Q.4 Which Article of the Indian Constitution mentions about the qualification for membership of the State Legislature?

- Ans
- ☒ 1. Article 173
  - ☒ 2. Article 179
  - ☒ 3. Article 171
  - ☒ 4. Article 180

Question ID : 630680408218  
Option 1 ID : 6306801591767  
Option 2 ID : 6306801591769  
Option 3 ID : 6306801591768  
Option 4 ID : 6306801591770  
Status : Not Answered  
Chosen Option : --

**Q.5** Identify whether the given statements about an earthquake are correct or incorrect.  
Statement 1: When the stress on the edge overcomes the friction, there is an earthquake that releases energy in waves that travel through Earth's crust and causes the shaking that we feel.  
Statement 2: An earthquake cannot be identified as a foreshock until after a larger earthquake in the same area occurs.

- Ans** ☒ 1. Both Statements 1 and 2 are incorrect  
☒ 2. Only Statement 1 is correct  
☒ 3. Only Statement 2 is correct  
☒ 4. Both Statements 1 and 2 are correct

Question ID : 630680407482  
Option 1 ID : 6306801588869  
Option 2 ID : 6306801588866  
Option 3 ID : 6306801588867  
Option 4 ID : 6306801588868  
Status : Not Answered  
Chosen Option : --

**Q.6** Select the correct alternative on the basis of the statements given about 'Rasa'.  
Statement I: It is the aesthetic experience that one derives while enjoying an artistic presentation.  
Statement II: It deals with the creation of human sentiments in the spectator or the aesthete.

- Ans** ☒ 1. Only Statement I is true.  
☒ 2. Neither Statement I nor Statement II is true.  
☒ 3. Only Statement II is true.  
☒ 4. Both Statement I and Statement II are true.

Question ID : 630680409181  
Option 1 ID : 6306801595553  
Option 2 ID : 6306801595556  
Option 3 ID : 6306801595554  
Option 4 ID : 6306801595555  
Status : Not Answered  
Chosen Option : --

**Q.7** If tax rate decreases with increase in taxable base, then this type of taxation is called:

- Ans** ☒ 1. degressive  
☒ 2. regressive  
☒ 3. progressive  
☒ 4. increasing

Question ID : 630680407140  
Option 1 ID : 6306801587503  
Option 2 ID : 6306801587502  
Option 3 ID : 6306801587504  
Option 4 ID : 6306801587505  
Status : Not Answered  
Chosen Option : --

Q.8 Manyakheta or Malkhed was the capital of which of the following kingdoms?

- Ans ☒ 1. Shaka  
☒ 2. Rashtrakuta  
☒ 3. Kushan  
☒ 4. Satavahana

Question ID : 630680412513  
Option 1 ID : 6306801608877  
Option 2 ID : 6306801608876  
Option 3 ID : 6306801608875  
Option 4 ID : 6306801608878  
Status : Not Answered  
Chosen Option : --

Q.9 \_\_\_\_\_ is commonly represented by the Greek letter  $\rho$  (rho).

- Ans ☒ 1. Electrical resistivity  
☒ 2. Current  
☒ 3. Flow of charges  
☒ 4. Electrical conductivity

Question ID : 63068099061  
Option 1 ID : 630680384951  
Option 2 ID : 630680384948  
Option 3 ID : 630680384950  
Option 4 ID : 630680384949  
Status : Answered  
Chosen Option : 1

Q.10 As of 2022, which of the following is the longest national waterway in India?

- Ans ☒ 1. Godavari-Krishna stretch  
☒ 2. Allahabad-Haldia stretch  
☒ 3. Sadiya-Dhubri stretch  
☒ 4. Kottapuram-Kollam stretch

Question ID : 630680409695  
Option 1 ID : 6306801597610  
Option 2 ID : 6306801597609  
Option 3 ID : 6306801597611  
Option 4 ID : 6306801597612  
Status : Answered  
Chosen Option : 3

Q.11 In which district of Uttarakhand does the Ramganga river originate from the Doodhatoli ranges?

- Ans ☒ 1. Champawat  
☒ 2. Chamoli  
☒ 3. Pauri Garhwal  
☒ 4. Almora

Question ID : 630680407448  
Option 1 ID : 6306801588733  
Option 2 ID : 6306801588730  
Option 3 ID : 6306801588731  
Option 4 ID : 6306801588732  
Status : Answered  
Chosen Option : 3

Q.12 Who among the following is NOT a vocalist?

- Ans ☒ 1. Pt. Kumar Gandharva  
☒ 2. Pt. Shiv Kumar Sharma  
☒ 3. Pt. Bhimsen Joshi  
☒ 4. Gangubai Hangal

Question ID : 630680409335  
Option 1 ID : 6306801596172  
Option 2 ID : 6306801596171  
Option 3 ID : 6306801596169  
Option 4 ID : 6306801596170  
Status : Answered  
Chosen Option : 2

Q.13 Arrange the following battles fought during Mughal period in correct chronological order.  
a. Battle of Khanwa  
b. First battle of Panipat  
c. Battle of Ghaghra  
d. Battle of Chausa

- Ans ☒ 1. a, c, b, d  
☒ 2. d, a, b, c  
☒ 3. c, a, d, b  
☒ 4. b, a, c, d

Question ID : 630680184289  
Option 1 ID : 630680714166  
Option 2 ID : 630680714168  
Option 3 ID : 630680714167  
Option 4 ID : 630680714165  
Status : Answered  
Chosen Option : 2

Q.14 What kind of energy does a yo-yo have before it is released?

- Ans ☒ 1. Kinetic energy  
☒ 2. Chemical energy  
☒ 3. Light energy  
☒ 4. Potential energy

Question ID : 63068076931  
Option 1 ID : 630680297821  
Option 2 ID : 630680297823  
Option 3 ID : 630680297824  
Option 4 ID : 630680297822  
Status : Not Answered  
Chosen Option : --

Q.15 The book Godaan was authored by \_\_\_\_\_ in 1936.

- Ans ☒ 1. Munshi Premchand  
☒ 2. Mulk Raj Anand  
☒ 3. Jawaharlal Nehru  
☒ 4. Mahatma Gandhi

Question ID : 630680701389  
Option 1 ID : 6306802747493  
Option 2 ID : 6306802747494  
Option 3 ID : 6306802747496  
Option 4 ID : 6306802747495  
Status : Answered  
Chosen Option : 1

Q.16 \_\_\_\_\_ was the first fast bowler who was the Indian test team captain.

- Ans ☒ 1. Zaheer Khan  
☒ 2. Javagal Srinath  
☒ 3. Kapil Dev  
☒ 4. Jaspreet Bumrah

Question ID : 630680177038  
Option 1 ID : 630680686358  
Option 2 ID : 630680686359  
Option 3 ID : 630680686356  
Option 4 ID : 630680686357  
Status : Not Answered  
Chosen Option : --

Q.17 Mohan Veena player Pandit Vishwa Mohan Bhatt won the Grammy Award in the year \_\_\_\_\_.

- Ans ☒ 1. 1992  
☒ 2. 1990  
☒ 3. 1994  
☒ 4. 1996

Question ID : 630680409260  
Option 1 ID : 6306801595870  
Option 2 ID : 6306801595869  
Option 3 ID : 6306801595871  
Option 4 ID : 6306801595872  
Status : Not Answered  
Chosen Option : --

Q.18 'Along The Red River: A Memoir' is a book about the life of \_\_\_\_\_.

- Ans ☒ 1. Nirupama Borgohain  
☒ 2. Sabita Goswami  
☒ 3. Mitra Phukan  
☒ 4. Pushpalata Das

Question ID : 630680409381  
Option 1 ID : 6306801596355  
Option 2 ID : 6306801596354  
Option 3 ID : 6306801596356  
Option 4 ID : 6306801596353  
Status : Not Answered  
Chosen Option : --

Q.19 Which of the following leaders had gone to Lucknow to invite Mahatma Gandhi to see the plight of the peasants in Champaran?

Ans ☒ 1. Raj Kumar Shukla

☐ 2. Hasan Mohani

☐ 3. JB Kripalani

☐ 4. Rajendra Prasad

Question ID : 630680412423

Option 1 ID : 6306801608517

Option 2 ID : 6306801608518

Option 3 ID : 6306801608515

Option 4 ID : 6306801608516

Status : Answered

Chosen Option : 1

Q.20 Garlic is good source of:

Ans ☐ 1. iron and copper

☒ 2. manganese and selenium

☐ 3. zinc and cobalt

☐ 4. magnesium and aluminium

Question ID : 630680407535

Option 1 ID : 6306801589080

Option 2 ID : 6306801589079

Option 3 ID : 6306801589081

Option 4 ID : 6306801589078

Status : Not Answered

Chosen Option : --

Q.21 Montane forests have which of the following types of wildlife species?

Ans ☐ 1. Sloth

☐ 2. Scorpion

☒ 3. Yak

☐ 4. Snail

Question ID : 630680869488

Option 1 ID : 6306803405386

Option 2 ID : 6306803405387

Option 3 ID : 6306803405385

Option 4 ID : 6306803405388

Status : Not Answered

Chosen Option : --

Q.22 Which river originates south of the equator and flows north through north-eastern Africa to drain into the Mediterranean Sea?

Ans ☐ 1. Congo River

☒ 2. Nile River

☐ 3. Amazon River

☐ 4. Lena River

Question ID : 63068076888

Option 1 ID : 630680297652

Option 2 ID : 630680297649

Option 3 ID : 630680297650

Option 4 ID : 630680297651

Status : Not Answered

Chosen Option : --

Q.23 Ashoka sent his son Mahendra and daughter Sanghmitra to spread the message of Dhamma to which of the following countries?

- Ans ☒ 1. Sri Lanka  
☐ 2. Burma  
☐ 3. Afghanistan  
☐ 4. China

Question ID : 630680412353  
Option 1 ID : 6306801608238  
Option 2 ID : 6306801608235  
Option 3 ID : 6306801608237  
Option 4 ID : 6306801608236  
Status : Answered  
Chosen Option : 1

Q.24 Who has the power to make law and policies for the country, as per the Indian Constitution?

- Ans ☐ 1. Political pressure groups  
☐ 2. The Prime Minister  
☐ 3. Political parties  
☒ 4. The Parliament

Question ID : 630680408296  
Option 1 ID : 6306801592079  
Option 2 ID : 6306801592082  
Option 3 ID : 6306801592080  
Option 4 ID : 6306801592081  
Status : Answered  
Chosen Option : 4

Q.25 Which article of the Indian Constitution deals with the Union Executive?

- Ans ☐ 1. Article 38 to 50  
☒ 2. Article 52 to 78  
☐ 3. Article 80 to 86  
☐ 4. Article 112 to 118

Question ID : 630680408213  
Option 1 ID : 6306801591747  
Option 2 ID : 6306801591749  
Option 3 ID : 6306801591748  
Option 4 ID : 6306801591750  
Status : Not Answered  
Chosen Option : --

Q.26 Name the white precipitate formed in the reaction of sodium sulphate and barium chloride.

- Ans ☐ 1. Barium hydroxide  
☒ 2. Barium sulphate  
☐ 3. Sodium chloride  
☐ 4. Sodium oxide

Question ID : 630680310223  
Option 1 ID : 6306801207023  
Option 2 ID : 6306801207024  
Option 3 ID : 6306801207021  
Option 4 ID : 6306801207022  
Status : Not Answered  
Chosen Option : --



Q.27 The minimum strength of the Council of Ministers in a state as per the Indian Constitution is \_\_\_\_\_ .

- Ans
- ☐ 1. 15 persons
  - ☐ 2. 13 persons
  - ☐ 3. 14 persons
  - ☒ 4. 12 persons

Question ID : 630680408323  
Option 1 ID : 6306801592190  
Option 2 ID : 6306801592188  
Option 3 ID : 6306801592189  
Option 4 ID : 6306801592187  
Status : Not Answered  
Chosen Option : --

Q.28 Which vitamin is involved in red blood cell formation, neurological function and DNA synthesis?

- Ans
- ☐ 1. Vitamin K
  - ☐ 2. Vitamin B7
  - ☐ 3. Vitamin E
  - ☒ 4. Vitamin B12

Question ID : 630680407470  
Option 1 ID : 6306801588821  
Option 2 ID : 6306801588820  
Option 3 ID : 6306801588818  
Option 4 ID : 6306801588819  
Status : Not Answered  
Chosen Option : --

Q.29 Bundu Khan was a \_\_\_\_\_ player of Delhi gharana.

- Ans
- ☒ 1. sarangi
  - ☐ 2. sarod
  - ☐ 3. flute
  - ☐ 4. santoor

Question ID : 630680409249  
Option 1 ID : 6306801595828  
Option 2 ID : 6306801595825  
Option 3 ID : 6306801595826  
Option 4 ID : 6306801595827  
Status : Answered  
Chosen Option : 1

Q.30 The International Olympic Committee was established in the year \_\_\_\_\_ .

- Ans
- ☒ 1. 1894
  - ☐ 2. 1892
  - ☐ 3. 1896
  - ☐ 4. 1890

Question ID : 630680192730  
Option 1 ID : 630680747467  
Option 2 ID : 630680747466  
Option 3 ID : 630680747468  
Option 4 ID : 630680747465  
Status : Not Answered  
Chosen Option : --

Q.31 What is the literacy rate in India as per the Census of 2011?

- Ans
- ☐ 1. 16.68%
  - ☐ 2. 65.46%
  - ☐ 3. 82.14%
  - ☒ 4. 72.98%

Question ID : 630680409709  
Option 1 ID : 6306801597668  
Option 2 ID : 6306801597667  
Option 3 ID : 6306801597665  
Option 4 ID : 6306801597666  
Status : Answered  
Chosen Option : 2

Q.32 The RBI act provides for how many members in RBI Monetary Policy Committee (MPC)?

- Ans
- ☒ 1. 6
  - ☐ 2. 4
  - ☐ 3. 8
  - ☐ 4. 5

Question ID : 630680407149  
Option 1 ID : 6306801587540  
Option 2 ID : 6306801587538  
Option 3 ID : 6306801587541  
Option 4 ID : 6306801587539  
Status : Not Answered  
Chosen Option : --

Q.33 Growth, as envisaged in the five-year plans, refers to:

- Ans
- ☐ 1. improvement in the state of equity in the country
  - ☐ 2. improvement in the level of education and primary health in the country
  - ☐ 3. self-reliance in producing all goods and services it requires, within its geographical boundaries
  - ☒ 4. increase in the country's capacity to produce the output of goods and services within the country

Question ID : 630680407129  
Option 1 ID : 6306801587458  
Option 2 ID : 6306801587460  
Option 3 ID : 6306801587461  
Option 4 ID : 6306801587459  
Status : Answered  
Chosen Option : 1

Q.34 What is the number of protons present in beryllium.

- Ans
- ☐ 1. 1
  - ☒ 2. 4
  - ☐ 3. 3
  - ☐ 4. 2

Question ID : 630680133821  
Option 1 ID : 630680518225  
Option 2 ID : 630680518223  
Option 3 ID : 630680518224  
Option 4 ID : 630680518222  
Status : Answered  
Chosen Option : 3

Q.35 Who among the following founded the Ramakrishna Mission to carry on humanitarian and social work?

- Ans ☒ 1. Debendranath Tagore  
☒ 2. Swami Vivekananda  
☒ 3. Ishwar Chandra Vidyasagar  
☒ 4. Aurobindo Ghosh

Question ID : 630680326446  
Option 1 ID : 6306801269875  
Option 2 ID : 6306801269876  
Option 3 ID : 6306801269873  
Option 4 ID : 6306801269874  
Status : Answered  
Chosen Option : 3

Q.36 Which of the following statements are correct in the context of the Indian Constitution?

1. There are three major organs of the government, namely Legislature, Executive and Judiciary.  
2. A separation of functions rather than powers is followed.  
3. All organs of the government are independent.

- Ans ☒ 1. 1, 2 and 3  
☒ 2. 1 and 3 only  
☒ 3. 1 and 2 only  
☒ 4. 2 and 3 only

Question ID : 630680296974  
Option 1 ID : 6306801155462  
Option 2 ID : 6306801155460  
Option 3 ID : 6306801155459  
Option 4 ID : 6306801155461  
Status : Not Answered  
Chosen Option : --

Q.37 Which festival is celebrated as the birth of Lord Krishna?

- Ans ☒ 1. Janmashtami  
☒ 2. Navratri  
☒ 3. Diwali  
☒ 4. Ganesh Chaturthi

Question ID : 630680409210  
Option 1 ID : 6306801595671  
Option 2 ID : 6306801595669  
Option 3 ID : 6306801595672  
Option 4 ID : 6306801595670  
Status : Answered  
Chosen Option : 1

Q.38 Which of the following awards is NOT given in the field of dance and music?

- Ans
- ☒ 1. Kalidas Samman
  - ☒ 2. Sangeet Natak Akademi Award
  - ☒ 3. Dronacharya Award
  - ☒ 4. Mahari Award

Question ID : 630680305931  
Option 1 ID : 6306801190077  
Option 2 ID : 6306801190078  
Option 3 ID : 6306801190080  
Option 4 ID : 6306801190079  
Status : Answered  
Chosen Option : 3

Q.39 Which wave oscillates parallel to the motion of the sound wave?

- Ans
- ☒ 1. Transverse wave
  - ☒ 2. Electromagnetic wave
  - ☒ 3. Mechanical wave
  - ☒ 4. Longitudinal wave

Question ID : 63068076938  
Option 1 ID : 630680297851  
Option 2 ID : 630680297849  
Option 3 ID : 630680297850  
Option 4 ID : 630680297852  
Status : Answered  
Chosen Option : 1

Q.40 Sangeet Majumdar was felicitated by Casa De La, Spain for her contribution to which of the following Indian Classical Dances?

- Ans
- ☒ 1. Kathak
  - ☒ 2. Mohiniyattam
  - ☒ 3. Bharatanatyam
  - ☒ 4. Kuchipudi

Question ID : 630680409344  
Option 1 ID : 6306801596207  
Option 2 ID : 6306801596206  
Option 3 ID : 6306801596205  
Option 4 ID : 6306801596208  
Status : Not Answered  
Chosen Option : --

Q.41 How many major ports are there in India for maritime transportation?

- Ans
- ☒ 1. 13
  - ☒ 2. 21
  - ☒ 3. 18
  - ☒ 4. 15

Question ID : 630680409728  
Option 1 ID : 6306801597741  
Option 2 ID : 6306801597744  
Option 3 ID : 6306801597743  
Option 4 ID : 6306801597742  
Status : Not Answered  
Chosen Option : --

Q.42 The \_\_\_\_\_ is/are given for outstanding performance in sports and games over a period of the previous four years and for showing qualities of leadership, sportsmanship and a sense of discipline.

- Ans ☒ 1. Arjuna Awards
- ☐ 2. Rashtriya Khel Protsahan Puraskar
- ☐ 3. Dronacharya Awards
- ☐ 4. Maulana Abul Kalam Azad (MAKA) Trophy

Question ID : 630680303674  
Option 1 ID : 6306801181265  
Option 2 ID : 6306801181267  
Option 3 ID : 6306801181266  
Option 4 ID : 6306801181268  
Status : Answered  
Chosen Option : 1

Q.43 Which of the following classical dance forms was initiated by Srimant Shankardev, a Vaishnava saint?

- Ans ☐ 1. Manipuri
- ☐ 2. Odissi
- ☒ 3. Sattriya
- ☐ 4. Kathak

Question ID : 630680309145  
Option 1 ID : 6306801202757  
Option 2 ID : 6306801202758  
Option 3 ID : 6306801202760  
Option 4 ID : 6306801202759  
Status : Answered  
Chosen Option : 3

Q.44 Which of the following was NOT one of the factors leading to the economic reforms in 1991?

- Ans ☐ 1. There was inflation in the economy.
- ☐ 2. There was a fall in India's foreign reserves.
- ☐ 3. There was a rise in the fiscal deficit of the country.
- ☒ 4. There was stagflation in the economy.

Question ID : 630680407176  
Option 1 ID : 6306801587647  
Option 2 ID : 6306801587649  
Option 3 ID : 6306801587648  
Option 4 ID : 6306801587646  
Status : Not Answered  
Chosen Option : --

Q.45 Article 50 of the Constitution of India refers to the \_\_\_\_\_.

- Ans ☒ 1. reservation of seats  
☒ 2. separation of judiciary from executive  
☒ 3. right to elementary education  
☒ 4. appointment of Governor

Question ID : 630680408207  
Option 1 ID : 6306801591723  
Option 2 ID : 6306801591726  
Option 3 ID : 6306801591724  
Option 4 ID : 6306801591725  
Status : Not Answered  
Chosen Option : --

Q.46 Which of the following foods generally increase blood pressure?

- Ans ☒ 1. Food with low salt and low sugar  
☒ 2. Food high in protein  
☒ 3. Food high in fibre  
☒ 4. Food high in salt, sugar and saturated or trans fats

Question ID : 630680102292  
Option 1 ID : 630680397454  
Option 2 ID : 630680397452  
Option 3 ID : 630680397453  
Option 4 ID : 630680397451  
Status : Not Answered  
Chosen Option : --

Q.47 How many members (elected and nominated) were there in the Council of State under the Government of India Act 1919 passed by the Parliament of the United Kingdom to expand participation of Indians in the government of India?

- Ans ☒ 1. 70  
☒ 2. 50  
☒ 3. 75  
☒ 4. 60

Question ID : 630680118821  
Option 1 ID : 630680460388  
Option 2 ID : 630680460386  
Option 3 ID : 630680460389  
Option 4 ID : 630680460387  
Status : Not Answered  
Chosen Option : --

Q.48 Who among the following was first female swimmer to win seven medals at a single Olympics, in Tokyo Olympics-2020?

- Ans ☒ 1. Kylie Masse  
☒ 2. Mary Hanna  
☒ 3. Regan Smith  
☒ 4. Emma McKeon

Question ID : 630680192722  
Option 1 ID : 630680747435  
Option 2 ID : 630680747434  
Option 3 ID : 630680747436  
Option 4 ID : 630680747433  
Status : Not Answered  
Chosen Option : --

Q.49 निम्नलिखित में से कौन-सी घटना, भारत में मानसून से संबंधित नहीं है?

- Ans
- ☐ 1. अरब सागर शाखा
  - ☐ 2. वर्षा अंतराल
  - ☐ 3. बादल फटना
  - ☒ 4. पश्चिमी विक्षोभ

Question ID : 630680409671

Option 1 ID : 6306801597514

Option 2 ID : 6306801597515

Option 3 ID : 6306801597513

Option 4 ID : 6306801597516

Status : Answered

Chosen Option : 2

Q.50 Who among the following was awarded the Bharat Ratna for his contribution to the Green Revolution in India?

- Ans
- ☐ 1. APJ Abdul Kalam
  - ☒ 2. C Subramaniam
  - ☐ 3. Govind Ballabh Pant
  - ☐ 4. PV Kane

Question ID : 630680407187

Option 1 ID : 6306801587692

Option 2 ID : 6306801587691

Option 3 ID : 6306801587690

Option 4 ID : 6306801587693

Status : Not Answered

Chosen Option : --

Section : Quantitative Aptitude

Q.1

The value of  $\frac{1}{2^2} + \frac{1}{2^3} \div \left(\frac{1}{2} + \frac{1}{2} \div 1\right) + 3\frac{1}{3} \div \frac{5}{2} \times \frac{3}{4} \div 6\frac{2}{3} \times \frac{7}{6}$  is:

- Ans
- ☐ 1.  $\frac{7}{40}$
  - ☐ 2.  $\frac{21}{20}$
  - ☒ 3.  $\frac{11}{20}$
  - ☐ 4.  $\frac{11}{30}$

Question ID : 630680427960

Option 1 ID : 6306801669885

Option 2 ID : 6306801669887

Option 3 ID : 6306801669884

Option 4 ID : 6306801669886

Status : Answered

Chosen Option : 3

Q.2 The population of a town increases annually by 20%. If the present population is 80lakh, then what is the difference between the population three years ago and 2years ago?

- Ans ☒ 1. 925925.93  
☐ 2. 85592.6  
☐ 3. 65592.6  
☐ 4. 75592.6

Question ID : 630680107409  
Option 1 ID : 630680417003  
Option 2 ID : 630680417002  
Option 3 ID : 630680417001  
Option 4 ID : 630680417000  
Status : Not Answered  
Chosen Option : --

Q.3 The height of a cylinder is 8 cm, and its area of the base is  $20\text{ cm}^2$  . Find its volume?

- Ans ☐ 1.  $80\text{ cm}^3$   
☐ 2.  $180\text{ cm}^3$   
☒ 3.  $160\text{ cm}^3$   
☐ 4.  $100\text{ cm}^3$

Question ID : 630680421561  
Option 1 ID : 6306801644708  
Option 2 ID : 6306801644710  
Option 3 ID : 6306801644709  
Option 4 ID : 6306801644707  
Status : Answered  
Chosen Option : 3

Q.4 Rajan and Rajat can do a work in 64 days and 48 days, respectively. Starting with Rajat, they work on alternate days. In how many days will the work be completed?

- Ans ☐ 1. 55  
☒ 2.  $54\frac{3}{4}$   
☐ 3. 54  
☐ 4.  $55\frac{3}{4}$

Question ID : 630680428409  
Option 1 ID : 6306801671682  
Option 2 ID : 6306801671681  
Option 3 ID : 6306801671680  
Option 4 ID : 6306801671683  
Status : Answered  
Chosen Option : 2



Q.5 The secant CD intersects the circle at E and CF is tangent to the circle at F. If the length of the secant CD is equal to 20 cm and the length of tangent CF is 15 cm, find the length of the chord DE.

- Ans ☒ 1. 8.75 cm  
☐ 2. 11.25 cm  
☐ 3. 9.25 cm  
☐ 4. 3.75 cm

Question ID : 630680421379  
Option 1 ID : 6306801643979  
Option 2 ID : 6306801643980  
Option 3 ID : 6306801643982  
Option 4 ID : 6306801643981  
Status : Answered  
Chosen Option : 1

Q.6 Melting a metal ball of radius 3 units, 27 identical dice and a ball of radius 1 units are made. What is the side of dice?

- Ans ☐ 1. 1.7 units  
☐ 2. 1.5 units  
☐ 3. 1.4 units  
☒ 4. 1.6 units

Question ID : 63068076302  
Option 1 ID : 630680295311  
Option 2 ID : 630680295310  
Option 3 ID : 630680295312  
Option 4 ID : 630680295309  
Status : Not Answered  
Chosen Option : --

Q.7 Simplify the given expression.  
 $12.3 - [7 + 0.8 \text{ of } (5.6 - 3.8 \times 1.03)]$

- Ans ☐ 1. 1.2368  
☐ 2. 7.8539  
☐ 3. 5.2314  
☒ 4. 3.9512

Question ID : 630680428050  
Option 1 ID : 6306801670247  
Option 2 ID : 6306801670244  
Option 3 ID : 6306801670245  
Option 4 ID : 6306801670246  
Status : Not Answered  
Chosen Option : --

Q.8 If  $\frac{5x+3y}{5x-3y} = \frac{7}{3}$ , then find x : y.

- Ans
- ☐ 1. 2 : 3
  - ☐ 2. 5 : 3
  - ☒ 3. 3 : 2
  - ☐ 4. 3 : 5

Question ID : 630680428418  
Option 1 ID : 6306801671717  
Option 2 ID : 6306801671719  
Option 3 ID : 6306801671718  
Option 4 ID : 6306801671716

Status : Answered

Chosen Option : 3

Q.9 A dishonest dealer sells an article at a 10% loss on the cost price but uses a weight of 40 g instead of 50 g. What is his percentage of profit?

- Ans
- ☒ 1. 12.5%
  - ☐ 2. 10.0%
  - ☐ 3. 11.5%
  - ☐ 4. 18.4%

Question ID : 630680429116  
Option 1 ID : 6306801674510  
Option 2 ID : 6306801674511  
Option 3 ID : 6306801674508  
Option 4 ID : 6306801674509

Status : Answered

Chosen Option : 1

Q.10 The total percentage change in the volume of a cuboid if its length and breadth are decreased by 15% and 25%, respectively, while its height is increased by 60% is:

- Ans
- ☐ 1. 5% decrease
  - ☐ 2. 2% decrease
  - ☒ 3. 2% increase
  - ☐ 4. 5% increase

Question ID : 630680428905  
Option 1 ID : 6306801673665  
Option 2 ID : 6306801673666  
Option 3 ID : 6306801673664  
Option 4 ID : 6306801673667

Status : Answered

Chosen Option : 3

Q.11 If  $x + \frac{1}{1 + \frac{1}{3 + \frac{1}{2}}} = 1$ , then the value of  $x$  is equal to:

- Ans
- ✓ 1.  $\frac{2}{9}$
  - ✗ 2.  $\frac{1}{7}$
  - ✗ 3.  $\frac{7}{9}$
  - ✗ 4.  $\frac{3}{7}$

Question ID : 630680428268  
Option 1 ID : 6306801671116  
Option 2 ID : 6306801671117  
Option 3 ID : 6306801671119  
Option 4 ID : 6306801671118  
Status : Not Answered  
Chosen Option : --

Q.12 A man rows 48 km and back in 48 hours. He can row 4 km with the stream in the same time as 3 km against the stream. The speed of the stream (in km/h) is:

- Ans
- ✗ 1.  $\frac{7}{21}$
  - ✗ 2.  $\frac{3}{29}$
  - ✗ 3.  $\frac{5}{21}$
  - ✓ 4.  $\frac{7}{24}$

Question ID : 630680428812  
Option 1 ID : 6306801673292  
Option 2 ID : 6306801673295  
Option 3 ID : 6306801673294  
Option 4 ID : 6306801673293  
Status : Not Answered  
Chosen Option : --

Q.13 The breadth of a rectangular lawn is decreased by 8% and its length is increased by 15%. Find the percentage change in the lawn area.

- Ans
- ✗ 1. 8.5% decrease
  - ✗ 2. 8.5% increase
  - ✗ 3. 5.8% decrease
  - ✓ 4. 5.8% increase

Question ID : 630680428146  
Option 1 ID : 6306801670631  
Option 2 ID : 6306801670629  
Option 3 ID : 6306801670630  
Option 4 ID : 6306801670628  
Status : Answered  
Chosen Option : 4

Q.14 The in-radius of a triangle is 8 cm, and the sum of the lengths of its sides is 125 cm. The area of the triangle (in  $\text{cm}^2$ ) is

- Ans
- ☒ 1. 480
  - ☒ 2. 250
  - ☒ 3. 500
  - ☒ 4. 1000

Question ID : 630680421364  
Option 1 ID : 6306801643921  
Option 2 ID : 6306801643922  
Option 3 ID : 6306801643920  
Option 4 ID : 6306801643919  
Status : Answered  
Chosen Option : 3

Q.15 If  $\sin(x+y) = \cos\{3(x+y)\}$ , then, the value of  $\cot\{2(x+y)\}$  is \_\_\_\_\_.

- Ans
- ☒ 1. 2
  - ☒ 2. 1
  - ☒ 3. -1
  - ☒ 4. -2

Question ID : 630680869589  
Option 1 ID : 6306803405738  
Option 2 ID : 6306803405740  
Option 3 ID : 6306803405739  
Option 4 ID : 6306803405741  
Status : Not Answered  
Chosen Option : --

Q.16 The value of  $\frac{2\cos 15^\circ \sin 15^\circ}{\cos^2 15^\circ - \sin^2 15^\circ}$  is:

- Ans
- ☒ 1.  $\frac{1}{\sqrt{3}}$
  - ☒ 2.  $\sqrt{3}$
  - ☒ 3.  $\frac{\sqrt{5}-1}{\sqrt{5}+1}$
  - ☒ 4.  $\infty$

Question ID : 630680869597  
Option 1 ID : 6306803405772  
Option 2 ID : 6306803405770  
Option 3 ID : 6306803405771  
Option 4 ID : 6306803405773  
Status : Answered  
Chosen Option : 1

Q.17 Study the given table and answer the question that follows.

The table shows the production of five different types of cars by a company from 1989 to 1994.

Year → Type ↓	1989	1990	1991	1992	1993	1994	Total
P	8	20	16	17	21	6	88
Q	16	10	14	12	12	14	78
R	21	17	16	15	13	8	90
S	4	6	10	16	20	31	87
T	25	18	19	30	14	27	133
Total	74	71	75	90	80	86	476

Which type of car constituted 25% of the total production of all types of cars in 1993?

- Ans
- ☒ 1. R
  - ☒ 2. Q
  - ☒ 3. P
  - ☒ 4. S

Question ID : 630680428278  
Option 1 ID : 6306801671158  
Option 2 ID : 6306801671157  
Option 3 ID : 6306801671156  
Option 4 ID : 6306801671159  
Status : Answered  
Chosen Option : 4

Q.18 The value of  $\frac{7 + 8 \times 8 \div 8 \text{ of } 8 + 8 \div 8 \times 5}{4 \div 4 \text{ of } 4 + 4 \times 4 \div 4 - 4 \div 4}$  is::

- Ans
- ☒ 1. 4
  - ☒ 2. 3
  - ☒ 3. 2
  - ☒ 4. 1

Question ID : 630680428082  
Option 1 ID : 6306801670375  
Option 2 ID : 6306801670374  
Option 3 ID : 6306801670373  
Option 4 ID : 6306801670372  
Status : Answered  
Chosen Option : 1

Q.19

The value of  $\frac{(275 \times 275 \times 275 + 725 \times 725 \times 725)}{(275 \times 275 + 725 \times 725 - 725 \times 275)} \times \frac{(275 \times 275 \times 275 - 725 \times 725 \times 725)}{(275 \times 275 + 725 \times 725 + 725 \times 275)}$  is:

- Ans
- ☒ 1. -45000
  - ☒ 2. 450000
  - ☒ 3. 45000
  - ☒ 4. -450000

Question ID : 630680107182

Option 1 ID : 630680416114

Option 2 ID : 630680416115

Option 3 ID : 630680416113

Option 4 ID : 630680416112

Status : Answered

Chosen Option : 4

Q.20

If  $x^2 + 4y^2 + 2x + 1 = 0$ , then find the value of  $x^{39} + y^{36}$ .

- Ans
- ☒ 1. 1
  - ☒ 2. -1
  - ☒ 3. 2
  - ☒ 4. -2

Question ID : 630680413585

Option 1 ID : 6306801613164

Option 2 ID : 6306801613165

Option 3 ID : 6306801613166

Option 4 ID : 6306801613167

Status : Answered

Chosen Option : 2

Q.21 The value of  $(12 + 18) \div 2 - 11 + 16 \times 4 - 28 + 13(-18 + 15)$  is:

- Ans
- ☒ 1. 3
  - ☒ 2. 0
  - ☒ 3. 1
  - ☒ 4. 2

Question ID : 630680428204

Option 1 ID : 6306801670863

Option 2 ID : 6306801670860

Option 3 ID : 6306801670861

Option 4 ID : 6306801670862

Status : Answered

Chosen Option : 3

Q.22 A trader gives a 40% discount on his goods. Further, he gives 20% discount on the goods. Find the single discount equivalent to these two successive discounts.

- Ans ☒ 1. 30%  
☒ 2. 60%  
☒ 3. 50%  
☒ 4. 52%

Question ID : 630680428577  
Option 1 ID : 6306801672354  
Option 2 ID : 6306801672352  
Option 3 ID : 6306801672355  
Option 4 ID : 6306801672353  
Status : Answered  
Chosen Option : 4

Q.23 The area of a triangle is  $486 \text{ cm}^2$  and its sides are in the ratio 3:4:5. The perimeter of the triangle is:

- Ans ☒ 1. 108 cm  
☒ 2. 308 cm  
☒ 3. 218 cm  
☒ 4. 105 cm

Question ID : 630680421616  
Option 1 ID : 6306801644927  
Option 2 ID : 6306801644930  
Option 3 ID : 6306801644928  
Option 4 ID : 6306801644929  
Status : Not Answered  
Chosen Option : --

Q.24 A drink is made by mixing water and juice in the ratio 9 : 7. If x litres of water and 2x litres of juice are mixed in 160 litres of drink, then the new ratio becomes 13 : 15. The quantity of drink (in litres) is:

- Ans ☒ 1. 240  
☒ 2. 280  
☒ 3. 300  
☒ 4. 260

Question ID : 630680422102  
Option 1 ID : 6306801646843  
Option 2 ID : 6306801646844  
Option 3 ID : 6306801646845  
Option 4 ID : 6306801646846  
Status : Answered  
Chosen Option : 2

Q.25 Study the given table and answer the question that follows.

The table shows the number of voters at three different centres A, B, C.

Centre	Total number of registered voters	Percentage of people who voted (Out of the total number of registered voters)
A	4600	78
B	5400	70
C	6500	85

Number of people who did not vote at centre B is what percentage more than those who did not vote at centre C?

Ans

- ☐ 1.  $66\frac{3}{13}\%$
- ☐ 2.  $66\frac{1}{13}\%$
- ☒ 3.  $66\frac{2}{13}\%$
- ☐ 4.  $66\frac{5}{13}\%$

Question ID : 630680428313

Option 1 ID : 6306801671297

Option 2 ID : 6306801671296

Option 3 ID : 6306801671298

Option 4 ID : 6306801671299

Status : Answered

Chosen Option : 3

Q.26 Simplify  $\frac{\tan 71^\circ + \tan 19^\circ}{1 - \tan 71^\circ \tan 19^\circ}$ .

Ans

- ☐ 1. 0
- ☐ 2.  $\sqrt{3}$
- ☒ 3. Not defined
- ☐ 4. 1

Question ID : 630680869598

Option 1 ID : 6306803405774

Option 2 ID : 6306803405776

Option 3 ID : 6306803405777

Option 4 ID : 6306803405775

Status : Answered

Chosen Option : 3



Q.27 The following table gives the number of males, females, educated males and educated females in a village over the years 2016 - 2020. Study the table carefully and answer the question.

Year / No.	2016	2017	2018	2019	2020
Males	1050	1200	1250	1300	1400
Females	900	1000	1020	1100	1200
Educated males	850	1000	1100	1150	1200
Educated females	600	820	950	980	1000

Find the percentage of the total number of educated females to the total number of females over all the years (up to 2 decimal places).

- Ans
- ☒ 1. 0.9233
  - ☒ 2. 0.8623
  - ☒ 3. 0.8333
  - ☒ 4. 0.8923

Question ID : 630680869712  
Option 1 ID : 6306803406214  
Option 2 ID : 6306803406216  
Option 3 ID : 6306803406215  
Option 4 ID : 6306803406217  
Status : Not Answered  
Chosen Option : --

Q.28 Simplify  $63 - [15 + \{17 - (9 - 7 + 1)\}]$ .

- Ans
- ☒ 1. 44
  - ☒ 2. 40
  - ☒ 3. 34
  - ☒ 4. 30

Question ID : 630680428123  
Option 1 ID : 6306801670539  
Option 2 ID : 6306801670536  
Option 3 ID : 6306801670538  
Option 4 ID : 6306801670537  
Status : Answered  
Chosen Option : 3

Q.29 The distance between two stations A and B is 800 km. A train covers the journey from A to B at a speed of 90 km/h and returns to A with a uniform speed of 65 km/h. Find the average speed of train during the whole journey (in km/h)?

- Ans
- ☒ 1. 75.48
  - ☒ 2. 70.45
  - ☒ 3. 82.36
  - ☒ 4. 80.50

Question ID : 630680428645  
Option 1 ID : 6306801672625  
Option 2 ID : 6306801672626  
Option 3 ID : 6306801672627  
Option 4 ID : 6306801672624  
Status : Answered  
Chosen Option : 1

Q.30 Find the value of the following expression.

$$(1 + \tan \theta + \sec \theta) \times (1 + \cot \theta - \operatorname{cosec} \theta)$$

Ans ☒ 1.  $\cos \theta \sin \theta$

☒ 2. 1

☒ 3. 2

☒ 4.  $\tan \theta$

Question ID : 630680349843

Option 1 ID : 6306801361661

Option 2 ID : 6306801361663

Option 3 ID : 6306801361664

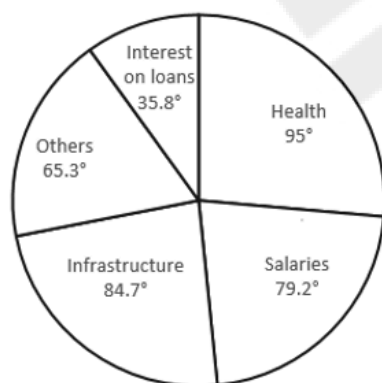
Option 4 ID : 6306801361662

Status : Answered

Chosen Option : 3

Q.31 Study the given pie-graph and answer the question that follows.

In a certain company, allocations to various sectors of the yearly budget per ₹7,200 crores are represented by this pie-diagram.



The expenditure (in ₹) on Infrastructure is:

Ans ☒ 1. ₹6,098 crores

☒ 2. ₹1,649 crores

☒ 3. ₹6,089 crores

☒ 4. ₹1,694 crores

Question ID : 630680387894

Option 1 ID : 6306801512198

Option 2 ID : 6306801512199

Option 3 ID : 6306801512200

Option 4 ID : 6306801512201

Status : Not Answered

Chosen Option : --

**Q.32** The following table shows the shares traded on Mumbai, Rajasthan, Uttar Pradesh and Uttarakhand stock exchanges:

Name of the company	Mumbai		Uttarakhand		Rajasthan		Uttar Pradesh	
	High	Low	High	Low	High	Low	High	Low
Aata tea	540	395	450	4255	320	510	440	310
Kolgate	34	57	60	42	25	60	20	70
Jmbuja cement	150	155	120	125	160	135	145	170

For Jmbuja cement, the ratio of the high rate of share to the low rate is maximum in the stock exchange at:

- Ans**    ☒ 1. Rajasthan  
          ☐ 2. Mumbai  
          ☐ 3. Uttar Pradesh  
          ☐ 4. Uttarakhand

Question ID : 630680429252  
Option 1 ID : 6306801675054  
Option 2 ID : 6306801675052  
Option 3 ID : 6306801675055  
Option 4 ID : 6306801675053  
Status : Answered  
Chosen Option : 1

**Q.33** 18 students of a class took part in a quiz. If the number of girls is 8 more than the number of boys, find the product of the number of boys and girls.

- Ans**    ☐ 1. 63  
          ☐ 2. 36  
          ☐ 3. 56  
          ☒ 4. 65

Question ID : 630680413578  
Option 1 ID : 6306801613139  
Option 2 ID : 6306801613138  
Option 3 ID : 6306801613136  
Option 4 ID : 6306801613137  
Status : Answered  
Chosen Option : 4

**Q.34** If  $a + b + c = 13$  and  $ab + bc + ca = 22$ , then the value of  $a^3 + b^3 + c^3 - 3abc$  is \_\_\_\_.

- Ans**    ☐ 1. 1225  
          ☐ 2. 1625  
          ☒ 3. 1339  
          ☐ 4. 1911

Question ID : 630680413554  
Option 1 ID : 6306801613041  
Option 2 ID : 6306801613042  
Option 3 ID : 6306801613040  
Option 4 ID : 6306801613043  
Status : Answered  
Chosen Option : 3

Q.35 A hostel had food provision for 300 students for a month. After 20 days, 50 students left the hostel. How long would the remaining food last? (1 month = 30 days)

- Ans ☒ 1. 14 days  
☒ 2. 12 days  
☒ 3. 10 days  
☒ 4. 16 days

Question ID : 630680428856  
Option 1 ID : 6306801673469  
Option 2 ID : 6306801673470  
Option 3 ID : 6306801673468  
Option 4 ID : 6306801673471  
Status : Answered  
Chosen Option : 2

Q.36 A person bought two buffaloes for ₹11,520. One is sold at a loss of 15% and the other is sold at a gain of 19%. If the selling price of both buffaloes is equal, find the cost price of the first one.

- Ans ☒ 1. ₹6,700  
☒ 2. ₹6,720  
☒ 3. ₹6,710  
☒ 4. ₹6,715

Question ID : 630680869695  
Option 1 ID : 6306803406147  
Option 2 ID : 6306803406149  
Option 3 ID : 6306803406146  
Option 4 ID : 6306803406148  
Status : Answered  
Chosen Option : 2

Q.37 If the simple interest on a certain sum of money for 20 months at the rate of 19.2% per annum exceeds the simple interest on the same sum for 15 months at the rate of 11.2% p.a. by ₹2,920, then what is the sum (in ₹, to the nearest hundreds)?

- Ans ☒ 1. 16,620  
☒ 2. 12,660  
☒ 3. 16,660  
☒ 4. 16,200

Question ID : 630680428009  
Option 1 ID : 6306801670082  
Option 2 ID : 6306801670083  
Option 3 ID : 6306801670081  
Option 4 ID : 6306801670080  
Status : Not Answered  
Chosen Option : --

Q.38 Find the surface area (in m<sup>2</sup>) of a cuboid that is 11 m long, 7 m broad and 4 m high.

- Ans ☒ 1. 249  
☒ 2. 289  
☒ 3. 298  
☒ 4. 320

Question ID : 630680421627  
Option 1 ID : 6306801644971  
Option 2 ID : 6306801644972  
Option 3 ID : 6306801644973  
Option 4 ID : 6306801644974  
Status : Answered  
Chosen Option : 3

Q.39 The following table shows the Gross Turnover (in Crores) of a company over five years:

Year	Gross Turnover
2015	13
2016	20
2017	15
2018	23
2019	25

The Gross Turnover for 2017 is what per cent of the Gross Turnover for 2019?

- Ans ☒ 1. 16  
☒ 2. 60  
☒ 3. 6  
☒ 4. 0.06

Question ID : 630680349028  
Option 1 ID : 6306801358402  
Option 2 ID : 6306801358401  
Option 3 ID : 6306801358403  
Option 4 ID : 6306801358404  
Status : Answered  
Chosen Option : 2

Q.40 Find the volume (in cm<sup>3</sup>) of a hemisphere of radius 18 cm. (Use  $\pi = \frac{22}{7}$ ) (Rounded off to two decimal places)

- Ans ☒ 1. 12200.43  
☒ 2. 12219.43  
☒ 3. 18750.23  
☒ 4. 11250.25

Question ID : 630680421554  
Option 1 ID : 6306801644682  
Option 2 ID : 6306801644681  
Option 3 ID : 6306801644679  
Option 4 ID : 6306801644680  
Status : Answered  
Chosen Option : 2

Q.41 A 234 m long train passes a person running at 9 km/h in the opposite direction, in 6 seconds. In how much time (in seconds) will it pass another person who is moving at 23.4 km/h, in the same direction?

Ans ☒ 1. 7.8

☐ 2. 7.2

☐ 3. 8

☐ 4. 8.4

Question ID : 630680869708

Option 1 ID : 6306803406201

Option 2 ID : 6306803406200

Option 3 ID : 6306803406198

Option 4 ID : 6306803406199

Status : Answered

Chosen Option : 1

Q.42 The speed of a boat when travelling downstream is 33 km/h, whereas when travelling upstream it is 27 km/h. What is the speed of the boat in still water?

Ans ☒ 1. 30 km/h

☐ 2. 60 km/h

☐ 3. 12 km/h

☐ 4. 6 km/h

Question ID : 630680428377

Option 1 ID : 6306801671555

Option 2 ID : 6306801671554

Option 3 ID : 6306801671552

Option 4 ID : 6306801671553

Status : Answered

Chosen Option : 1

Q.43 Swati earns a sum of ₹40,000, out of which she saves 25%. She spends the remaining amount on food and education in the ratio of 3 : 2. What is the percentage of expenditure incurred on education to her total income?

Ans ☒ 1. 30%

☐ 2. 60%

☐ 3. 40%

☐ 4. 20%

Question ID : 630680429160

Option 1 ID : 6306801674685

Option 2 ID : 6306801674687

Option 3 ID : 6306801674686

Option 4 ID : 6306801674684

Status : Answered

Chosen Option : 1

Q.44 What is the area of the sector of a circle whose radius is 35 cm and whose arc subtends an angle of  $72^\circ$  at the centre of the circle?

$$\left(\pi = \frac{22}{7}\right)$$

- Ans ☒ 1.  $770 \text{ cm}^2$   
☒ 2.  $610 \text{ cm}^2$   
☒ 3.  $810 \text{ cm}^2$   
☒ 4.  $970 \text{ cm}^2$

Question ID : 630680421441  
Option 1 ID : 6306801644229  
Option 2 ID : 6306801644228  
Option 3 ID : 6306801644227  
Option 4 ID : 6306801644230  
Status : Answered  
Chosen Option : 1

Q.45 Simplify:

$$27 \div 4 \text{ of } 6 \times [16 \div 8 \times (12 - 8)] - (14 \div 7 \times 28)$$

- Ans ☒ 1. 62  
☒ 2. - 51  
☒ 3. - 47  
☒ 4. 27

Question ID : 630680427989  
Option 1 ID : 6306801670001  
Option 2 ID : 6306801670002  
Option 3 ID : 6306801670000  
Option 4 ID : 6306801670003  
Status : Answered  
Chosen Option : 3

Q.46 Taking any three of the line segments out of segments of length 2 cm, 5 cm, 7 cm and 8 cm, the number of triangles that can be formed is:

- Ans ☒ 1. 1  
☒ 2. 3  
☒ 3. 4  
☒ 4. 2

Question ID : 630680421454  
Option 1 ID : 6306801644279  
Option 2 ID : 6306801644281  
Option 3 ID : 6306801644282  
Option 4 ID : 6306801644280  
Status : Not Answered  
Chosen Option : --

Q.47 The value of  $264 \div 8 - 1 - 32 \times 2 + 80 \div 5 \times 40 \div 20$  is:

Ans ☒ 1. 0

☐ 2. 1

☐ 3. 3

☐ 4. 2

Question ID : 630680428205

Option 1 ID : 6306801670867

Option 2 ID : 6306801670866

Option 3 ID : 6306801670864

Option 4 ID : 6306801670865

Status : Answered

Chosen Option : 1

Q.48 Study the given table and answer the question that follows.

The table shows the yearly production (in thousands) of scooters in five different factories (P, Q, R, S and T) from 1985 to 1989.

*Yearly production (in thousands) of scooters in different factories.*

Factory	1985	1986	1987	1988	1989
P	20	15	24	13	17
Q	16	23	41	20	15
R	14	21	30	16	12
S	25	17	15	12	22
T	40	32	39	41	35
Total	115	108	149	102	101

The ratio of the production of scooters by factory P to that by factory T in 1985 is:

Ans ☐ 1. 3 : 2

☒ 2. 1 : 2

☐ 3. 2 : 3

☐ 4. 2 : 1

Question ID : 630680428274

Option 1 ID : 6306801671143

Option 2 ID : 6306801671140

Option 3 ID : 6306801671142

Option 4 ID : 6306801671141

Status : Answered

Chosen Option : 2



Q.49 The marked price of an immersion rod in an electronic store is ₹900. The store offers a discount of 12% on its sale. At what price (in ₹) can a customer buy it from the electronic store?

- Ans
- ☒ 1. 782
  - ☒ 2. 797
  - ☒ 3. 787
  - ☒ 4. 792

Question ID : 630680869673  
Option 1 ID : 6306803406058  
Option 2 ID : 6306803406061  
Option 3 ID : 6306803406059  
Option 4 ID : 6306803406060  
Status : Answered  
Chosen Option : 4

Q.50 Sapna is double efficient as compared to Rakesh. If they both work together on a project and complete it in 48 days, then the number of days in which Sapna alone can complete the project is:

- Ans
- ☒ 1. 68
  - ☒ 2. 72
  - ☒ 3. 52
  - ☒ 4. 69 ½

Question ID : 630680869711  
Option 1 ID : 6306803406210  
Option 2 ID : 6306803406211  
Option 3 ID : 6306803406213  
Option 4 ID : 6306803406212  
Status : Answered  
Chosen Option : 2

Section : English Comprehension

Q.1 Select the most appropriate ANTONYM of the underlined word in the following sentence.  
The teacher praised the student for his diligent work and consistent effort.

- Ans
- ☒ 1. frazzle
  - ☒ 2. persistent
  - ☒ 3. lazy
  - ☒ 4. squander

Question ID : 630680517377  
Option 1 ID : 6306802021905  
Option 2 ID : 6306802021906  
Option 3 ID : 6306802021907  
Option 4 ID : 6306802021904  
Status : Answered  
Chosen Option : 3

Q.2 Select the most appropriate synonym of the underlined word.

I will strive to win the race.

- Ans
- ☐ 1. trouble
  - ☐ 2. Support
  - ☐ 3. Assume
  - ☒ 4. Attempt

Question ID : 630680297283  
Option 1 ID : 6306801156599  
Option 2 ID : 6306801156600  
Option 3 ID : 6306801156601  
Option 4 ID : 6306801156602  
Status : Answered  
Chosen Option : 4

Q.3 Select the most appropriate ANTONYM of the given word.  
Pitiable

- Ans
- ☐ 1. Eradicate
  - ☒ 2. Pleasant
  - ☐ 3. Grievous
  - ☐ 4. Aggregate

Question ID : 630680295216  
Option 1 ID : 6306801148590  
Option 2 ID : 6306801148591  
Option 3 ID : 6306801148588  
Option 4 ID : 6306801148589  
Status : Not Answered  
Chosen Option : --

Q.4 Identify from the given options the word which is similar in meaning to the following word.  
Efface

- Ans
- ☐ 1. Hidden
  - ☐ 2. Makeup
  - ☐ 3. Daily
  - ☒ 4. Destroy

Question ID : 630680360067  
Option 1 ID : 6306801402216  
Option 2 ID : 6306801402215  
Option 3 ID : 6306801402214  
Option 4 ID : 6306801402213  
Status : Answered  
Chosen Option : 4

Q.5 Select the most appropriate synonym of the underlined word.

I was astonished to know the truth.

- Ans ☒ 1. Stunned  
☐ 2. Awesome  
☐ 3. Blindsided  
☐ 4. Sickened

Question ID : 630680297282  
Option 1 ID : 6306801156597  
Option 2 ID : 6306801156596  
Option 3 ID : 6306801156598  
Option 4 ID : 6306801156595  
Status : Answered  
Chosen Option : 1

Q.6 Select the phrase/idiom that will improve the underlined part of the given sentence.  
When our principal said she was leaving the company, I played out the opportunity to fill the job.

- Ans ☐ 1. glided at the opportunity  
☒ 2. jumped at the opportunity  
☐ 3. started at the opportunity  
☐ 4. ran to the opportunity

Question ID : 630680175905  
Option 1 ID : 630680681887  
Option 2 ID : 630680681886  
Option 3 ID : 630680681885  
Option 4 ID : 630680681884  
Status : Answered  
Chosen Option : 2

Q.7 The following sentence has been split into four segments. Identify the segment that contains a grammatical/spelling error.  
The sons of the old farmer / fell off after their father / breathed his last / in the village.

- Ans ☐ 1. in the village.  
☐ 2. breathed his last  
☐ 3. The sons of the old farmer  
☒ 4. fell off after their father

Question ID : 630680415351  
Option 1 ID : 6306801620154  
Option 2 ID : 6306801620153  
Option 3 ID : 6306801620151  
Option 4 ID : 6306801620152  
Status : Answered  
Chosen Option : 2

Q.8 Select the most appropriate option with correct usage of the preposition to substitute the underlined segment in the given sentence.  
The core part in Artificial Intelligence (AI) is knowledge engineering, machine learning, machine perception, and robotics.

- Ans
- ☒ 1. The core part on Artificial Intelligence
  - ☒ 2. The core part of Artificial Intelligence
  - ☒ 3. The core part from Artificial Intelligence
  - ☒ 4. The core part with Artificial Intelligence

Question ID : 630680206721  
Option 1 ID : 630680801483  
Option 2 ID : 630680801486  
Option 3 ID : 630680801485  
Option 4 ID : 630680801484  
Status : Answered  
Chosen Option : 2

Q.9 Select the most appropriate ANTONYM of the given word.  
Quaint

- Ans
- ☒ 1. Brisk
  - ☒ 2. Ridiculous
  - ☒ 3. Ordinary
  - ☒ 4. Distinct

Question ID : 630680297870  
Option 1 ID : 6306801158880  
Option 2 ID : 6306801158879  
Option 3 ID : 6306801158881  
Option 4 ID : 6306801158882  
Status : Not Answered  
Chosen Option : --

Q.10 Select the sentence that has the correct use of words and spellings from the options given below.

- Ans
- ☒ 1. The profesional athlete pushed her body to the limit, surpassing all expectations and acheiving a new personal record.
  - ☒ 2. The profesional athlete pushed her body to the limit, surpasing all expectasions and achieving a new personal record.
  - ☒ 3. The professional athlete pushed her body to the limit, surpasing all expectations and acheiving a new personal record.
  - ☒ 4. The professional athlete pushed her body to the limit, surpassing all expectations and achieving a new personal record.

Question ID : 630680410006  
Option 1 ID : 6306801598853  
Option 2 ID : 6306801598855  
Option 3 ID : 6306801598856  
Option 4 ID : 6306801598854  
Status : Answered  
Chosen Option : 4

Q.11 Select the most appropriate ANTONYM of the given word.

Languid

- Ans ☒ 1. Exceptional  
☒ 2. Lazy  
☒ 3. Loyal  
☒ 4. Energetic

Question ID : 630680436156  
Option 1 ID : 6306801702566  
Option 2 ID : 6306801702565  
Option 3 ID : 6306801702568  
Option 4 ID : 6306801702567  
Status : Not Answered  
Chosen Option : --

Q.12 Select the most appropriate meaning of the idiom in the given sentence.  
She's feeling under the weather today.

- Ans ☒ 1. She's feeling happy and energetic.  
☒ 2. She's feeling adventurous and ready for a challenge.  
☒ 3. She's feeling worried about something.  
☒ 4. She's not feeling well or is a bit sick.

Question ID : 630680517346  
Option 1 ID : 6306802021780  
Option 2 ID : 6306802021783  
Option 3 ID : 6306802021782  
Option 4 ID : 6306802021781  
Status : Answered  
Chosen Option : 4

Q.13 Select the option that can be used as a one-word substitute for the given group of words.  
Madness or obsession with males

- Ans ☒ 1. Polygamy  
☒ 2. Loquacious  
☒ 3. Misandrist  
☒ 4. Andromania

Question ID : 630680414926  
Option 1 ID : 6306801618448  
Option 2 ID : 6306801618450  
Option 3 ID : 6306801618449  
Option 4 ID : 6306801618447  
Status : Answered  
Chosen Option : 3

Q.14 Select the INCORRECTLY spelt word.

- Ans ☒ 1. Assimilation  
☒ 2. Pluckiness  
☒ 3. Accumulation  
☒ 4. Exestenalism

Question ID : 630680409900  
Option 1 ID : 6306801598430  
Option 2 ID : 6306801598432  
Option 3 ID : 6306801598429  
Option 4 ID : 6306801598431  
Status : Not Answered  
Chosen Option : --

Q.15 Select the most appropriate option that can substitute the underlined segment in the given sentence. If no substitution is required, select 'No substitution'.  
Not a word didn't they speak to the others about the sad turn of events.

- Ans ☒ 1. did they speak  
☒ 2. No substitution  
☒ 3. do they speak  
☒ 4. had they speak

Question ID : 630680414506  
Option 1 ID : 6306801616783  
Option 2 ID : 6306801616786  
Option 3 ID : 6306801616784  
Option 4 ID : 6306801616785  
Status : Answered  
Chosen Option : 1

Q.16 Select the most appropriate meaning of the given idiom.

A vicious cycle

- Ans ☒ 1. a situation in which one problem causes another one, making the original problem impossible to solve.  
☒ 2. a situation in which one problem causes another one, making the first one easy to solve.  
☒ 3. a situation in which one problem creates another one, making the original problem easy to forget.  
☒ 4. a situation in which several problems merge and become one extremely complex problem.

Question ID : 630680517347  
Option 1 ID : 6306802021785  
Option 2 ID : 6306802021786  
Option 3 ID : 6306802021784  
Option 4 ID : 6306802021787  
Status : Answered  
Chosen Option : 1

**Q.17** The following sentence has been divided into parts. One of them may contain an error. Select the part that contains the error from the given options. If you don't find any error, mark 'No error' as your answer.  
I had done / my cooking when / Vishnu came to see me.

- Ans**    ☒ 1. No error  
          ☒ 2. I had done  
          ☒ 3. Vishnu came to see me  
          ☒ 4. my cooking when

Question ID : 630680184891  
Option 1 ID : 630680716528  
Option 2 ID : 630680716525  
Option 3 ID : 630680716527  
Option 4 ID : 630680716526  
Status : Answered  
Chosen Option : 1

**Q.18** Select the option that can be used as a one-word substitute for the given group of words.

A mythological animal with one horn on its forehead

- Ans**    ☒ 1. Unicameral  
          ☒ 2. Unipod  
          ☒ 3. Unific  
          ☒ 4. Unicorn

Question ID : 630680414811  
Option 1 ID : 6306801617989  
Option 2 ID : 6306801617988  
Option 3 ID : 6306801617987  
Option 4 ID : 6306801617990  
Status : Answered  
Chosen Option : 4

**Q.19** Select the most appropriate segment to substitute the underlined words in the given sentence.

Mr. Patel is likely to win the elections in the sweeping majority.

- Ans**    ☒ 1. elections by a sweeping majority  
          ☒ 2. elections on a sweeping majority  
          ☒ 3. elections of a sweeping majority  
          ☒ 4. elections at a sweeping majority

Question ID : 630680435974  
Option 1 ID : 6306801701853  
Option 2 ID : 6306801701855  
Option 3 ID : 6306801701854  
Option 4 ID : 6306801701856  
Status : Answered  
Chosen Option : 1

Q.20 Select the option that can be used as a one-word substitute for the given group of words.

One who does not express himself freely.

- Ans
- ☒ 1. Approachable
  - ☒ 2. Immodest
  - ☒ 3. Introvert
  - ☒ 4. Outgoing

Question ID : 630680414791  
Option 1 ID : 6306801617910  
Option 2 ID : 6306801617908  
Option 3 ID : 6306801617907  
Option 4 ID : 6306801617909  
Status : Answered  
Chosen Option : 3

Q.21 Select the most appropriate meaning of the given idiom.  
The best of both worlds

- Ans
- ☒ 1. Everyone gets a chance
  - ☒ 2. Stay strong in a difficult situation
  - ☒ 3. Do a perfectly good job
  - ☒ 4. Good in every way

Question ID : 630680517357  
Option 1 ID : 6306802021826  
Option 2 ID : 6306802021825  
Option 3 ID : 6306802021827  
Option 4 ID : 6306802021824  
Status : Answered  
Chosen Option : 4

Q.22 Select the most appropriate idiom that can substitute the underlined words in the given sentence.  
I have been living without a lot of money since I lost my job.

- Ans
- ☒ 1. receiving a kickback
  - ☒ 2. living hand to mouth
  - ☒ 3. keeping my chin up
  - ☒ 4. as genuine as a three-dollar bill

Question ID : 630680183590  
Option 1 ID : 630680711369  
Option 2 ID : 630680711370  
Option 3 ID : 630680711372  
Option 4 ID : 630680711371  
Status : Answered  
Chosen Option : 2



Q.23 Identify the INCORRECTLY spelt word in the given sentence and select the option that rectifies the spelling error.  
Thousands of years ago, great masters of Ayurveda, notably Sushrut and Charaka, discussed in detail the use of spices for culinary and medical purpose.

- Ans ☒ 1. Parpose  
☒ 2. Notably  
☒ 3. Discused  
☒ 4. Cullinary

Question ID : 630680517485  
Option 1 ID : 6306802022339  
Option 2 ID : 6306802022336  
Option 3 ID : 6306802022337  
Option 4 ID : 6306802022338  
Status : Answered  
Chosen Option : 2

Q.24 Select the most appropriate option to substitute the underlined segment in the given sentence.  
The veteran footballer was expected for reach here by 10 o'clock, the notice said.

- Ans ☒ 1. expected on reach here  
☒ 2. expected to reach here  
☒ 3. expected of reach here  
☒ 4. expected by reach here

Question ID : 630680414524  
Option 1 ID : 6306801616858  
Option 2 ID : 6306801616857  
Option 3 ID : 6306801616855  
Option 4 ID : 6306801616856  
Status : Answered  
Chosen Option : 2

Q.25 Underlined word in the sentence is not spelt correctly. Identify the correct spelling from the options given below.  
The boys seem irresponsibly insaucient about bullying the juniors.

- Ans ☒ 1. Insouciant  
☒ 2. Insuociant  
☒ 3. Insouciant  
☒ 4. Insouceant

Question ID : 630680409868  
Option 1 ID : 6306801598304  
Option 2 ID : 6306801598302  
Option 3 ID : 6306801598301  
Option 4 ID : 6306801598303  
Status : Not Answered  
Chosen Option : --

Q.26 Select the most appropriate option that can substitute the underlined word in the given idiom.  
At the last hour

- Ans ☒ 1. half  
☒ 2. eleventh  
☒ 3. sixth  
☒ 4. twelfth

Question ID : 630680441961  
Option 1 ID : 6306801725452  
Option 2 ID : 6306801725450  
Option 3 ID : 6306801725453  
Option 4 ID : 6306801725451  
Status : Answered  
Chosen Option : 2

Q.27 Select the most appropriate segment to substitute the underlined words in the given sentence.

The Sumo wrestler seemed to be incapable in being tired.

- Ans ☒ 1. incapable of being tired  
☒ 2. incapable from being tired  
☒ 3. incapable to being tired  
☒ 4. incapable by being tired

Question ID : 630680436020  
Option 1 ID : 6306801702021  
Option 2 ID : 6306801702023  
Option 3 ID : 6306801702024  
Option 4 ID : 6306801702022  
Status : Answered  
Chosen Option : 1

Q.28 Select the most appropriate option that can substitute the underlined segment in the given sentence.

Ratul's capability of being able to speak two languages is apt for this post.

- Ans ☒ 1. bilingual  
☒ 2. bicultural  
☒ 3. bidialectical  
☒ 4. lingual

Question ID : 630680414912  
Option 1 ID : 6306801618391  
Option 2 ID : 6306801618392  
Option 3 ID : 6306801618393  
Option 4 ID : 6306801618394  
Status : Answered  
Chosen Option : 1

**Q.29** Parts of the following sentence have been given as options. Select the option that contains an error.  
There are four tributaries of Ganga and it is ranked as the fifth most polluted river of the world.

- Ans
- ☒ 1. is ranked as the fifth
  - ☒ 2. of Ganga and it
  - ☒ 3. There are four tributaries
  - ☒ 4. most polluted river of the world.

Question ID : 630680192255  
Option 1 ID : 630680745623  
Option 2 ID : 630680745622  
Option 3 ID : 630680745621  
Option 4 ID : 630680745624

Status : Not Attempted and Marked For Review

Chosen Option : --

**Q.30** Select the most appropriate meaning of the given idiom.  
Bite the bullet

- Ans
- ☒ 1. To avoid a situation
  - ☒ 2. To help someone achieve their goals
  - ☒ 3. To eat something unpleasant
  - ☒ 4. To face a difficult situation

Question ID : 630680517281  
Option 1 ID : 6306802021520  
Option 2 ID : 6306802021523  
Option 3 ID : 6306802021522  
Option 4 ID : 6306802021521

Status : Answered

Chosen Option : 4

**Q.31** Select the INCORRECTLY spelt word in the given sentence.  
Mount Vesuvius is a volcano that erapts hot ashes which fall from the sky like a blizzard.

- Ans
- ☒ 1. Erapts
  - ☒ 2. Blizzard
  - ☒ 3. Ashes
  - ☒ 4. Volcano

Question ID : 630680396920  
Option 1 ID : 6306801547749  
Option 2 ID : 6306801547751  
Option 3 ID : 6306801547750  
Option 4 ID : 6306801547748

Status : Answered

Chosen Option : 1

Q.32 Select the most appropriate ANTONYM of the given word.  
Suspend

- Ans ☒ 1. Extend  
☒ 2. Terminate  
☒ 3. Project  
☒ 4. Resume

Question ID : 630680517316  
Option 1 ID : 6306802021662  
Option 2 ID : 6306802021660  
Option 3 ID : 6306802021663  
Option 4 ID : 6306802021661  
Status : Answered  
Chosen Option : 4

Q.33 Select the word which means the same as the group of words underlined in the given sentence.

Today, a man who betrayed his own country in exchange for money was the topic of every news report.

- Ans ☒ 1. Gangster  
☒ 2. Terrorist  
☒ 3. Traitor  
☒ 4. Conman

Question ID : 630680414823  
Option 1 ID : 6306801618038  
Option 2 ID : 6306801618036  
Option 3 ID : 6306801618035  
Option 4 ID : 6306801618037  
Status : Answered  
Chosen Option : 3

Q.34 Select the most appropriate meaning of the given idiom.  
Beat around the bush

- Ans ☒ 1. To avoid talking about what is important  
☒ 2. To await an explanation  
☒ 3. To take on a task that is way too big  
☒ 4. To do something without any hesitation

Question ID : 630680192449  
Option 1 ID : 630680746387  
Option 2 ID : 630680746385  
Option 3 ID : 630680746388  
Option 4 ID : 630680746386  
Status : Answered  
Chosen Option : 1

Q.35 Select the most appropriate ANTONYM of the underlined word.  
The artist's abstract painting was enigmatic to the viewers.

- Ans ☒ 1. Mysterious  
☒ 2. Instigating  
☒ 3. Clear  
☒ 4. Thrilling

Question ID : 630680396864  
Option 1 ID : 6306801547524  
Option 2 ID : 6306801547526  
Option 3 ID : 6306801547525  
Option 4 ID : 6306801547527  
Status : Answered  
Chosen Option : 3

Q.36 Select the most appropriate meaning of the given idiom.

Through thick and thin

- Ans ☒ 1. Always supporting someone even if there are problems or difficulties  
☒ 2. Sometimes thin, sometimes thick  
☒ 3. Never giving up a friendship  
☒ 4. Never giving up on a goal

Question ID : 630680517379  
Option 1 ID : 6306802021913  
Option 2 ID : 6306802021912  
Option 3 ID : 6306802021915  
Option 4 ID : 6306802021914  
Status : Answered  
Chosen Option : 4

Q.37 Select the most appropriate option that can substitute the underlined words in the given sentence.

The road is too busy for elderly people that they cannot cross safely.

- Ans ☒ 1. that it is difficult to cross.  
☒ 2. to cross safely.  
☒ 3. that it cannot be crossed properly.  
☒ 4. that it is impossible for them to cross.

Question ID : 630680443861  
Option 1 ID : 6306801732765  
Option 2 ID : 6306801732764  
Option 3 ID : 6306801732766  
Option 4 ID : 6306801732767  
Status : Answered  
Chosen Option : 2

Q.38 Rectify the sentence by selecting the correct spelling of the underlined word from the options.  
The baby smiled and laughed at the pickaboo game.

- Ans
- ☒ 1. peakaboo
  - ☒ 2. pikaboo
  - ☒ 3. peekaboo
  - ☒ 4. pekaboo

Question ID : 630680517496  
Option 1 ID : 6306802022382  
Option 2 ID : 6306802022380  
Option 3 ID : 6306802022381  
Option 4 ID : 6306802022383  
Status : Answered  
Chosen Option : 4

Q.39 The given sentence is divided into four segments. Identify the segment that contains a grammatical error.  
Had you been / working regularly, / you had completed / the project yesterday.

- Ans
- ☒ 1. Had you been
  - ☒ 2. the project yesterday
  - ☒ 3. you had completed
  - ☒ 4. working regularly

Question ID : 630680157020  
Option 1 ID : 630680607632  
Option 2 ID : 630680607635  
Option 3 ID : 630680607634  
Option 4 ID : 630680607633  
Status : Answered  
Chosen Option : 3

Q.40 Select the most appropriate option that can substitute the underlined segment in the given sentence.

Before she began, she asked the teacher whether she write with a pen or a pencil.

- Ans
- ☒ 1. she can write
  - ☒ 2. she wrote
  - ☒ 3. she should write
  - ☒ 4. she did write.

Question ID : 630680436031  
Option 1 ID : 6306801702063  
Option 2 ID : 6306801702061  
Option 3 ID : 6306801702062  
Option 4 ID : 6306801702064  
Status : Answered  
Chosen Option : 1

**Comprehension:**

In the following passage, some words have been deleted. Read the passage carefully and select the most appropriate option to fill in each blank.  
Childhood is an important phase in a person's life. Children are free from worries, tensions and stresses so they lead a very (1)\_\_\_\_\_ life. This is the only reason they create golden and beautiful memories during this period which are (2)\_\_\_\_\_ in their adulthood. It is the responsibility of parents and guardians to shape the future of a child as he is very (3)\_\_\_\_\_ and can drift in any direction. If they have made any mistakes, we should (4)\_\_\_\_\_ them instead of misbehaving with them. How we have behaved with them will be (5)\_\_\_\_\_ on their minds which will reflect in later stages.

**SubQuestion No : 41**

**Q.41** Select the most appropriate option to fill in blank No. 1.

- Ans**    ☒ 1. carefree  
          ☒ 2. careful  
          ☒ 3. stressful  
          ☒ 4. cautious

Question ID : 630680515018  
Option 1 ID : 6306802012630  
Option 2 ID : 6306802012629  
Option 3 ID : 6306802012631  
Option 4 ID : 6306802012632  
Status : Answered  
Chosen Option : 3

**Comprehension:**

In the following passage, some words have been deleted. Read the passage carefully and select the most appropriate option to fill in each blank.  
Childhood is an important phase in a person's life. Children are free from worries, tensions and stresses so they lead a very (1)\_\_\_\_\_ life. This is the only reason they create golden and beautiful memories during this period which are (2)\_\_\_\_\_ in their adulthood. It is the responsibility of parents and guardians to shape the future of a child as he is very (3)\_\_\_\_\_ and can drift in any direction. If they have made any mistakes, we should (4)\_\_\_\_\_ them instead of misbehaving with them. How we have behaved with them will be (5)\_\_\_\_\_ on their minds which will reflect in later stages.

**SubQuestion No : 42**

**Q.42** Select the most appropriate option to fill in blank No. 2.

- Ans**    ☒ 1. cherished  
          ☒ 2. blocked  
          ☒ 3. dumped  
          ☒ 4. neglected

Question ID : 630680515019  
Option 1 ID : 6306802012634  
Option 2 ID : 6306802012635  
Option 3 ID : 6306802012636  
Option 4 ID : 6306802012633  
Status : Answered  
Chosen Option : 1

**Comprehension:**

In the following passage, some words have been deleted. Read the passage carefully and select the most appropriate option to fill in each blank.  
Childhood is an important phase in a person's life. Children are free from worries, tensions and stresses so they lead a very (1)\_\_\_\_\_ life. This is the only reason they create golden and beautiful memories during this period which are (2)\_\_\_\_\_ in their adulthood. It is the responsibility of parents and guardians to shape the future of a child as he is very (3)\_\_\_\_\_ and can drift in any direction. If they have made any mistakes, we should (4)\_\_\_\_\_ them instead of misbehaving with them. How we have behaved with them will be (5)\_\_\_\_\_ on their minds which will reflect in later stages.

**SubQuestion No : 43**

**Q.43 Select the most appropriate option to fill in blank No. 3.**

- Ans
- ☒ 1. mature
  - ☒ 2. innocent
  - ☒ 3. crafty
  - ☒ 4. guilty

Question ID : 630680515020  
Option 1 ID : 6306802012640  
Option 2 ID : 6306802012637  
Option 3 ID : 6306802012639  
Option 4 ID : 6306802012638  
Status : Answered  
Chosen Option : 3

**Comprehension:**

In the following passage, some words have been deleted. Read the passage carefully and select the most appropriate option to fill in each blank.  
Childhood is an important phase in a person's life. Children are free from worries, tensions and stresses so they lead a very (1)\_\_\_\_\_ life. This is the only reason they create golden and beautiful memories during this period which are (2)\_\_\_\_\_ in their adulthood. It is the responsibility of parents and guardians to shape the future of a child as he is very (3)\_\_\_\_\_ and can drift in any direction. If they have made any mistakes, we should (4)\_\_\_\_\_ them instead of misbehaving with them. How we have behaved with them will be (5)\_\_\_\_\_ on their minds which will reflect in later stages.

**SubQuestion No : 44**

**Q.44 Select the most appropriate option to fill in blank No. 4.**

- Ans
- ☒ 1. damage
  - ☒ 2. create
  - ☒ 3. design
  - ☒ 4. rectify

Question ID : 630680515021  
Option 1 ID : 6306802012641  
Option 2 ID : 6306802012643  
Option 3 ID : 6306802012642  
Option 4 ID : 6306802012644  
Status : Answered  
Chosen Option : 4



**Comprehension:**

In the following passage, some words have been deleted. Read the passage carefully and select the most appropriate option to fill in each blank.  
Childhood is an important phase in a person's life. Children are free from worries, tensions and stresses so they lead a very (1)\_\_\_\_\_ life. This is the only reason they create golden and beautiful memories during this period which are (2)\_\_\_\_\_ in their adulthood. It is the responsibility of parents and guardians to shape the future of a child as he is very (3)\_\_\_\_\_ and can drift in any direction. If they have made any mistakes, we should (4)\_\_\_\_\_ them instead of misbehaving with them. How we have behaved with them will be (5)\_\_\_\_\_ on their minds which will reflect in later stages.

**SubQuestion No : 45**

**Q.45 Select the most appropriate option to fill in blank No. 5.**

- Ans
- ☒ 1. published
  - ☒ 2. bleached
  - ☒ 3. imprinted
  - ☒ 4. coloured

Question ID : 630680515022  
Option 1 ID : 6306802012648  
Option 2 ID : 6306802012645  
Option 3 ID : 6306802012646  
Option 4 ID : 6306802012647  
Status : Answered  
Chosen Option : 3

**Comprehension:**

Read the given passage and answer the questions that follow.  
Have you ever taken the time to stop and consider the dirt under your feet? Leonardo da Vinci said, "We know more about the movement of celestial bodies than about the soil underfoot." Yet, our very survival as humans – and life on this planet – is intimately linked with the health of a thin layer of soil enveloping the earth.  
Soil provides society with essential food, feed, fibre and raw materials, as well as being home to a quarter of the earth's biodiversity. Soils are also the largest organic carbon reservoir on Earth and although highly dynamic, are very fragile. Chop a forest down and it might grow back in 50 years, but lose 10 cm of soil and get ready to wait 1,000 years to get it back. Without soil, our planet would be unrecognisable to us, and more like the barren and inhospitable surface of the Moon or Mars.  
Until recently, we did not even know how deep the soil is below our feet. Like the best mysteries, a bit of digging is required for soils to be fully understood and for their history to be laid bare.  
When they are visible, a range of questions arise. What does the variation in colour with depth mean? How much carbon is stored? Is the soil dense or light, damaged or healthy? Answering these questions is important, but presents a significant challenge and may require years of training.

**SubQuestion No : 46**

**Q.46 Select the most suitable word from the passage which means 'difficult to stay or live in'.**

- Ans
- ☒ 1. Inhospitable
  - ☒ 2. Dense
  - ☒ 3. Barren
  - ☒ 4. Essential

Question ID : 630680406917  
Option 1 ID : 6306801586704  
Option 2 ID : 6306801586705  
Option 3 ID : 6306801586703  
Option 4 ID : 6306801586702  
Status : Answered  
Chosen Option : 3

Comprehension:

Read the given passage and answer the questions that follow.

Have you ever taken the time to stop and consider the dirt under your feet? Leonardo da Vinci said, "We know more about the movement of celestial bodies than about the soil underfoot." Yet, our very survival as humans – and life on this planet – is intimately linked with the health of a thin layer of soil enveloping the earth.

Soil provides society with essential food, feed, fibre and raw materials, as well as being home to a quarter of the earth's biodiversity. Soils are also the largest organic carbon reservoir on Earth and although highly dynamic, are very fragile. Chop a forest down and it might grow back in 50 years, but lose 10 cm of soil and get ready to wait 1,000 years to get it back. Without soil, our planet would be unrecognisable to us, and more like the barren and inhospitable surface of the Moon or Mars.

Until recently, we did not even know how deep the soil is below our feet. Like the best mysteries, a bit of digging is required for soils to be fully understood and for their history to be laid bare.

When they are visible, a range of questions arise. What does the variation in colour with depth mean? How much carbon is stored? Is the soil dense or light, damaged or healthy? Answering these questions is important, but presents a significant challenge and may require years of training.

SubQuestion No : 47

Q.47 How many years are required to renew the loss of 10 cm of soil?

- Ans
- ☒ 1. 1,00,000
  - ☒ 2. 1,000
  - ☒ 3. 100
  - ☒ 4. 10,000

Question ID : 630680406916  
Option 1 ID : 6306801586701  
Option 2 ID : 6306801586699  
Option 3 ID : 6306801586700  
Option 4 ID : 6306801586698  
Status : Answered  
Chosen Option : 2

Comprehension:

Read the given passage and answer the questions that follow.

Have you ever taken the time to stop and consider the dirt under your feet? Leonardo da Vinci said, "We know more about the movement of celestial bodies than about the soil underfoot." Yet, our very survival as humans – and life on this planet – is intimately linked with the health of a thin layer of soil enveloping the earth.

Soil provides society with essential food, feed, fibre and raw materials, as well as being home to a quarter of the earth's biodiversity. Soils are also the largest organic carbon reservoir on Earth and although highly dynamic, are very fragile. Chop a forest down and it might grow back in 50 years, but lose 10 cm of soil and get ready to wait 1,000 years to get it back. Without soil, our planet would be unrecognisable to us, and more like the barren and inhospitable surface of the Moon or Mars.

Until recently, we did not even know how deep the soil is below our feet. Like the best mysteries, a bit of digging is required for soils to be fully understood and for their history to be laid bare.

When they are visible, a range of questions arise. What does the variation in colour with depth mean? How much carbon is stored? Is the soil dense or light, damaged or healthy? Answering these questions is important, but presents a significant challenge and may require years of training.

SubQuestion No : 48

Q.48 What is the tone of the speaker?

- Ans
- ☒ 1. Derisive
  - ☒ 2. Dogmatic
  - ☒ 3. Sarcastic
  - ☒ 4. Alarming

Question ID : 630680406918  
Option 1 ID : 6306801586706  
Option 2 ID : 6306801586708  
Option 3 ID : 6306801586707  
Option 4 ID : 6306801586709  
Status : Answered  
Chosen Option : 2

Comprehension:

Read the given passage and answer the questions that follow.  
Have you ever taken the time to stop and consider the dirt under your feet? Leonardo da Vinci said, "We know more about the movement of celestial bodies than about the soil underfoot." Yet, our very survival as humans – and life on this planet – is intimately linked with the health of a thin layer of soil enveloping the earth.  
Soil provides society with essential food, feed, fibre and raw materials, as well as being home to a quarter of the earth's biodiversity. Soils are also the largest organic carbon reservoir on Earth and although highly dynamic, are very fragile. Chop a forest down and it might grow back in 50 years, but lose 10 cm of soil and get ready to wait 1,000 years to get it back. Without soil, our planet would be unrecognisable to us, and more like the barren and inhospitable surface of the Moon or Mars.  
Until recently, we did not even know how deep the soil is below our feet. Like the best mysteries, a bit of digging is required for soils to be fully understood and for their history to be laid bare.  
When they are visible, a range of questions arise. What does the variation in colour with depth mean? How much carbon is stored? Is the soil dense or light, damaged or healthy? Answering these questions is important, but presents a significant challenge and may require years of training.

SubQuestion No : 49

Q.49 Identify the most suitable title for the given passage.

- Ans
- ☒ 1. Moon and Mars Expedition
  - ☒ 2. Necessity of Mining
  - ☒ 3. The Uninhabitable Universe
  - ☒ 4. Mysteries Under Man's Feet

Question ID : 630680406919  
Option 1 ID : 6306801586711  
Option 2 ID : 6306801586710  
Option 3 ID : 6306801586713  
Option 4 ID : 6306801586712  
Status : Answered  
Chosen Option : 4

Comprehension:

Read the given passage and answer the questions that follow.  
Have you ever taken the time to stop and consider the dirt under your feet? Leonardo da Vinci said, "We know more about the movement of celestial bodies than about the soil underfoot." Yet, our very survival as humans – and life on this planet – is intimately linked with the health of a thin layer of soil enveloping the earth.  
Soil provides society with essential food, feed, fibre and raw materials, as well as being home to a quarter of the earth's biodiversity. Soils are also the largest organic carbon reservoir on Earth and although highly dynamic, are very fragile. Chop a forest down and it might grow back in 50 years, but lose 10 cm of soil and get ready to wait 1,000 years to get it back. Without soil, our planet would be unrecognisable to us, and more like the barren and inhospitable surface of the Moon or Mars.  
Until recently, we did not even know how deep the soil is below our feet. Like the best mysteries, a bit of digging is required for soils to be fully understood and for their history to be laid bare.  
When they are visible, a range of questions arise. What does the variation in colour with depth mean? How much carbon is stored? Is the soil dense or light, damaged or healthy? Answering these questions is important, but presents a significant challenge and may require years of training.

SubQuestion No : 50

Q.50 Mankind's survival, according to the passage, solely depends on \_\_\_\_\_ .

- Ans
- ☒ 1. inventions
  - ☒ 2. celestial bodies
  - ☒ 3. soil
  - ☒ 4. reproduction

Question ID : 630680406915  
Option 1 ID : 6306801586696  
Option 2 ID : 6306801586694  
Option 3 ID : 6306801586697  
Option 4 ID : 6306801586695  
Status : Answered  
Chosen Option : 3

---

Online  
Journal