



CANDIDATE RESPONSE SHEET/GRIEVANCE SYSTEM

[View Your Responses](#)[Click Here to View Grievance Questions](#)Admin loggedin.[[Logout](#)]

Roll No.

Exam Level :

Test Date : 10 Dec 2025

Test Time and Shift : 10:00 AM (Shift-1)

[Correct Option selected](#) [Wrong Option selected](#) [Correct Option](#) [Not Answered](#)[Save / Print](#)[Click Here for PART-A](#)[Click Here for PART-B](#)[Click Here for PART-C](#)[Click Here for PART-D](#)**PART-A (General Intelligence and Reasoning)**[Click Here to Challenge Question No.: 1](#)

Q.No: 1 In the word SOLUTION, which letter is 3rd to the left of the 6th letter from the left?

शब्द SOLUTION में, कौन सा अक्षर बाएं से छठे अक्षर के बाएं से तीसरा है?

☒ L☐ L☐ O☐ O☐ T☐ T☐ U☐ U[Click Here to Challenge Question No.: 2](#)

Q.No: 2	Choose the address that is the same as the one given below. 2nd Floor, Lotus Arcade, Ashram Road, Ahmedabad, Gujarat - 380009 वह पता चुनें जो नीचे दिए गए पते के समान हो। 2nd Floor, Lotus Arcade, Ashram Road, Ahmedabad, Gujarat - 380009
	2nd Floor, Lotus Arcade, Ashram Road, Ahmedabad, Maharashtra - 380009 2nd Floor, Lotus Arcade, Ashram Road, Ahmedabad, Maharashtra - 380009
	2nd Floor, Lotus Arcade, Ashram Road, Ahmedabad, Uttar Pradesh - 380009 2nd Floor, Lotus Arcade, Ashram Road, Ahmedabad, Uttar Pradesh - 380009
	2nd Floor, Lotus Arcade, Ashram Road, Ahmedabad, Rajasthan - 380009 2nd Floor, Lotus Arcade, Ashram Road, Ahmedabad, Rajasthan - 380009
	2nd Floor, Lotus Arcade, Ashram Road, Ahmedabad, Gujarat - 380009 2nd Floor, Lotus Arcade, Ashram Road, Ahmedabad, Gujarat - 380009

[Click Here to Challenge Question No.: 3](#)

Q.No: 3	The Chennai seminar was 2 days before the Bengaluru seminar. The Hyderabad seminar was 5 days after the Chennai seminar. If the Bengaluru seminar was on 18 th April, on which date was the Hyderabad seminar? चेन्नई सेमिनार बेंगलुरु सेमिनार से 2 दिन पहले था। हैदराबाद सेमिनार चेन्नई सेमिनार के 5 दिन बाद था। अगर बेंगलुरु सेमिनार 18 th अप्रैल को था, तो हैदराबाद सेमिनार किस तारीख को था?
	19 th April 19 th अप्रैल
	20 th April 20 th अप्रैल
	21 st April 21 st अप्रैल
	22 nd April 22 nd अप्रैल

[Click Here to Challenge Question No.: 4](#)

Q.No: 4	The seminar in Vadodara occurred two days before the one in Ahmedabad. Surat's seminar was one day after Ahmedabad's, and Rajkot's was two days before Vadodara. If Surat's seminar happened on 18 th March, what was the seminar date in Rajkot? वडोदरा में सेमिनार अहमदाबाद में सेमिनार से दो दिन पहले हुआ था। सूरत का सेमिनार अहमदाबाद के एक दिन बाद था, और राजकोट का सेमिनार वडोदरा से दो दिन पहले था। अगर सूरत का सेमिनार 18 th मार्च को हुआ, तो राजकोट में सेमिनार की तारीख क्या थी?
	12 th March 12 th मार्च
	13 th March 13 th मार्च
	14 th March 14 th मार्च
	15 th March 15 th मार्च

Q.No: 5	Select the number from among the given options that can replace the question mark (?) in the following series. 19, 19, 38, 114, ?, 2280 दिए गए विकल्पों में से उस संख्या का चयन कीजिए जो निम्नलिखित श्रृंखला में प्रश्न चिन्ह (?) के स्थान पर आ सकती है। 19, 19, 38, 114, ?, 2280
	344
	344
	1140
	1140
	456
	456
	224
	224

Q.No: 6	Select the number from among the given options that can replace the question mark (?) in the following series. 64, 68, 77, 93, 118, ? दिए गए विकल्पों में से वह संख्या चुनिए जो निम्नलिखित श्रृंखला में प्रश्न चिन्ह (?) के स्थान पर आ सकती है। 64, 68, 77, 93, 118, ?
	157
	157
	154
	154
	134
	134
	168
	168

Q.No: 7	If $12 \times 2 + 5 = 29$, $5 \times 3 + 8 = 23$, then $7 \times 4 + 6 = ?$ अगर $12 \times 2 + 5 = 29$, $5 \times 3 + 8 = 23$, तो $7 \times 4 + 6 = ?$
	34
	34
	38
	38
	19
	19
	71
	71

Q.No: 8	If $5 + 3 = 40$, $6 + 4 = 60$, then $3 + 2 = ?$
---------	---

अगर $5 + 3 = 40$, $6 + 4 = 60$, तो $3 + 2 = ?$

<https://sscstudy.com/>

25

25

20

20

16

16

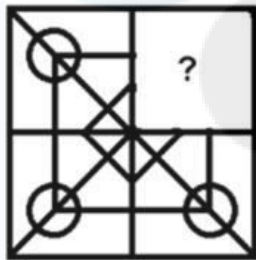
15

15

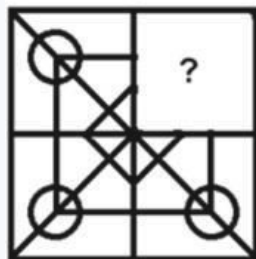
[Click Here to Challenge Question No.: 9](#)

Q.No: 9

Select the answer figure that, when placed in the blank space of the given figure, will complete the pattern.



उस उत्तर आकृति का चयन कीजिए जिसे दी गई आकृति के रिक्त स्थान में रखने पर पैटर्न पूरा हो जाएगा।

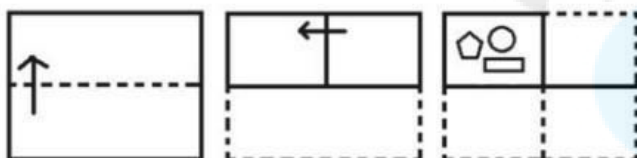


<https://sscstudy.com/>

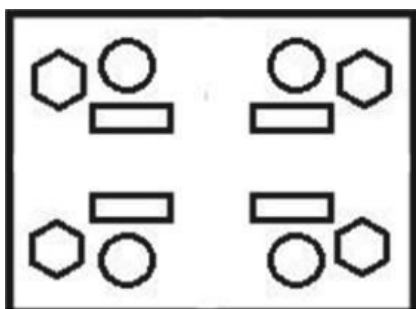
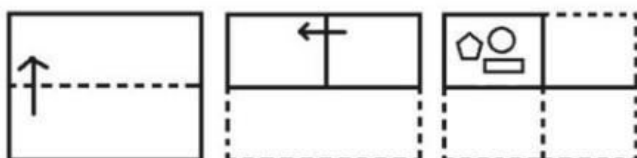


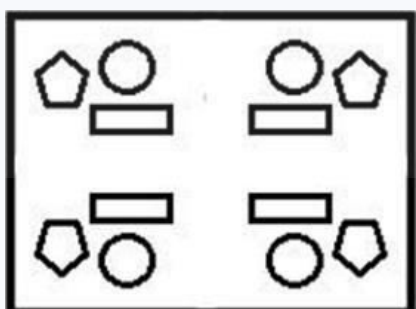
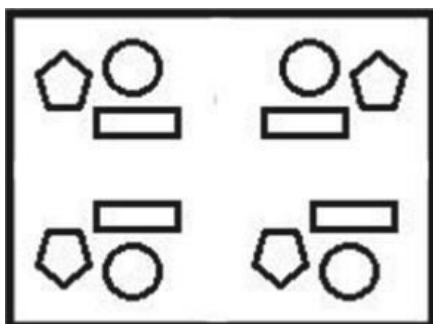
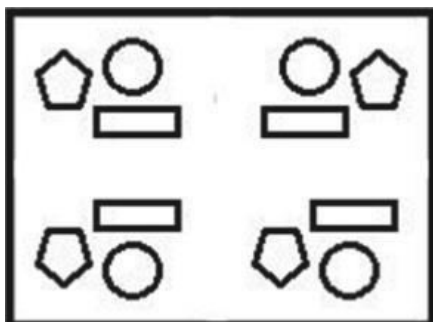
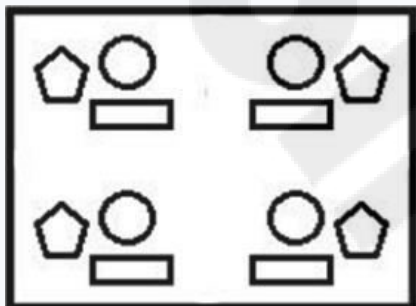
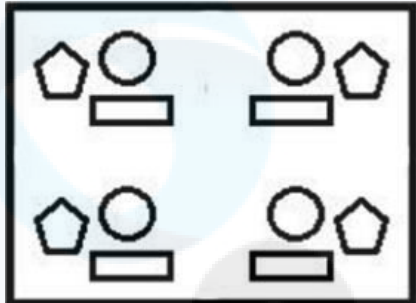
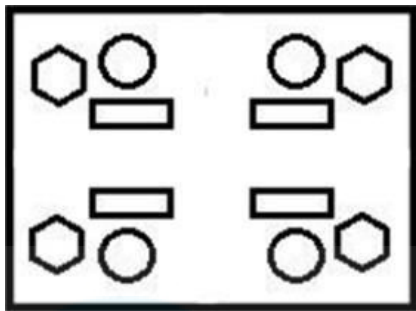

[Click Here to Challenge Question No.: 10](#)

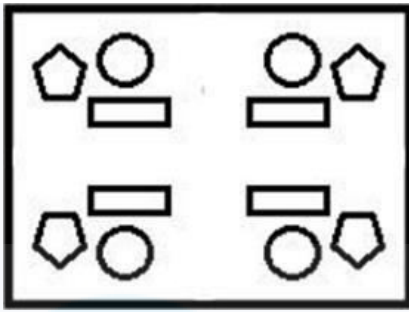
Q.No: 10 The sequence of folding a piece of paper and the manner in which it is folded has been cut as shown in the following figure. How would this paper look when unfolded?



एक कागज़ के टुकड़े को मोड़ने का क्रम और उसे मोड़ने का तरीका नीचे दी गई आकृति में दिखाया गया है। खोलने पर यह कागज़ कैसा दिखेगा?






[Click Here to Challenge Question No.: 11](#)

Q.No: 11 Choose the word that doesn't belong.

वह शब्द चुनें जो यहाँ नहीं होना चाहिए।

Patna

पटना

Raipur

रायपुर

Hyderabad

हैदराबाद

Agra

आगरा

[Click Here to Challenge Question No.: 12](#)

Q.No: 12 Which code is inconsistent with the pattern Letter-Digit-Letter-Digit-Letter-Digit?

कौन सा कोड पैटर्न अक्षर-अंक-अक्षर-अंक-अक्षर-अंक के साथ असंगत है?

A1B2C3

A1B2C3

D2E3F4

D2E3F4

G3H4I5

G3H4I5

J4K4L

J4K4L

[Click Here to Challenge Question No.: 13](#)

Q.No: 13 By rearranging the letters of 'RESTAURANT', we can get a meaningful English word. Each letter is denoted with a different number as shown in the table below. The combination of the numbers for the word, which is not meaningful, is ____.

1	2	3	4	5	6	7	8	9	10
R	E	S	T	A	U	R	A	N	T

'RESTAURANT' के अक्षरों को पुनर्व्यवस्थित करके, हम एक सार्थक अंग्रेजी शब्द प्राप्त कर सकते हैं। प्रत्येक अक्षर को एक अलग संख्या से दर्शाया गया है, जैसा कि नीचे दी गई तालिका में दिखाया गया है। उस शब्द के लिए संख्याओं का संयोजन, जो सार्थक नहीं है, ____ है।

1	2	3	4	5	6	7	8	9	10
R	E	S	T	A	U	R	A	N	T

9, 5, 4, 6, 7, 2

	9, 5, 4, 6, 7, 2
	7, 2, 4, 6, 1, 9
	7, 2, 4, 6, 1, 9
	9, 8, 7, 1, 5, 4, 2, 3
	9, 8, 7, 1, 5, 4, 2, 3
	6, 10, 7, 2, 5
	6, 10, 7, 2, 5

[Click Here to Challenge Question No.: 14](#)

Q.No: 14	Consider the following pairs of numbers. Based on the odd and even nature of their sum or difference, identify the pair that does not follow the same pattern as the others. निम्नलिखित संख्याओं के युग्मों पर विचार कीजिए। उनके योग या अंतर की विषम और सम प्रकृति के आधार पर, उस युग्म की पहचान कीजिए जो अन्य युग्मों के समान पैटर्न का पालन नहीं करता है।
	13 and 1 13 और 1
	24 and 12 24 और 12
	14 and 4 14 और 4
	18 and 9 18 और 9

[Click Here to Challenge Question No.: 15](#)

Q.No: 15	Study the following information to answer the given questions. Seven persons: A, B, C, D, E, F, and G purchased some items one after another i.e., eraser, pen, TV, printer, mouse, mug, and phone but not necessarily in the same order. A purchased a mouse and there is a gap of 2 persons between A and E. E didn't come first or at last. As many persons came after A are the same as the number of persons who came before F who purchased the pen. C purchased an eraser immediately before A. There is a gap of 4 persons between E and G who purchased a printer. D purchased a phone immediately before E who purchased a TV. The mug is purchased by B. There is a gap of how many persons between F and G? दिए गए प्रश्नों के उत्तर देने के लिए निम्नलिखित जानकारी का अध्ययन कीजिए। सात व्यक्ति: A, B, C, D, E, F और G ने एक के बाद एक कुछ वस्तुएँ खरीदीं, जैसे: रबड़, पेन, टीवी, प्रिंटर, माउस, मग और फ़ोन, लेकिन जरूरी नहीं कि इसी क्रम में हों। A ने एक माउस खरीदा और A और E के बीच 2 व्यक्तियों का अंतर है। E पहले या अंत में नहीं आया। A के बाद जितने व्यक्ति आए, उतने ही व्यक्ति F से पहले आए, जिसने पेन खरीदा था। C ने A से ठीक पहले रबड़ खरीदी। E और G, जिसने प्रिंटर खरीदा, के बीच 4 व्यक्तियों का अंतर है। D ने E, जिसने टीवी खरीदा था, से ठीक पहले एक फ़ोन खरीदा। मग B ने खरीदा है। F और G के बीच कितने व्यक्तियों का अंतर है?
	1 1
	2 2
	4 4
	3 3

Not Answered

Q.No: 16	<p>There are eight persons A, C, F, L, M, Q, R and T in the family of three generation. There are three married couples in the family. C is the wife of F. T is son of F. A is son of M who is married to L. L is mother of C. R is daughter-in-law of M. Q is niece of C.</p> <p>All of the given pairs are related in some way except one. Find the pair which is NOT belongs to the group?</p> <p>तीन पीढ़ियों वाले एक परिवार में आठ व्यक्ति A, C, F, L, M, Q, R और T हैं। परिवार में तीन विवाहित जोड़े हैं। C, F की पत्नी है। T, F का पुत्र है। A, M का पुत्र है, जो L से विवाहित है। L, C की माँ है। R, M की बहू है। Q, C की भतीजी है।</p> <p>दिए गए सभी जोड़ों में से एक को छोड़कर बाकी सभी किसी न किसी तरह से आपस में संबंधित हैं। वह जोड़ा ज्ञात कीजिए जो इस समूह से संबंधित नहीं है?</p>
	M-A
	M-A
	R-Q
	R-Q
	C-A
	C-A
	F-T
	F-T

Not Answered

Q.No: 17	<p>Read the following statement carefully and identify the conclusion that follows.</p> <p>Statement: The roads were blocked due to a protest by factory workers.</p> <p>Conclusions:</p> <p>I. The protest disrupted public life. II. Factory workers are demanding better wages.</p> <p>निम्नलिखित कथन को ध्यानपूर्वक पढ़ें और निष्कर्ष का चयन करें।</p> <p>कथन: कारखाना श्रमिकों के विरोध प्रदर्शन के कारण सड़कें अवरुद्ध हो गईं।</p> <p>निष्कर्ष:</p> <p>I. विरोध प्रदर्शन ने सार्वजनिक जीवन को बाधित कर दिया। II. कारखाना श्रमिक बेहतर वेतन की मांग कर रहे हैं।</p>
	Only I follows केवल I अनुसरण करता है
	Only II follows केवल II अनुसरण करता है
	Both I and II follow I और II दोनों अनुसरण करते हैं
	Neither I nor II follows न तो I और न ही II अनुसरण करता है

Q.No: 18 Read the following statement carefully and identify the conclusion that follows.

Statement:
Some computers are mobiles. No mobile is a radio.

Conclusions:

- I. Some computers are radios.
II. No computer is a radio.

निम्नलिखित कथन को ध्यानपूर्वक पढ़ें और निष्कर्ष निकालें।

कथन:
कुछ कंप्यूटर मोबाइल हैं। कोई भी मोबाइल रेडियो नहीं है।

- निष्कर्ष:
I. कुछ कंप्यूटर रेडियो हैं।
II. कोई भी कंप्यूटर रेडियो नहीं है।

Only I follows

केवल I अनुसरण करता है

Only II follows

केवल II अनुसरण करता है

Both I and II follow

I और II दोनों अनुसरण करते हैं

Neither I nor II follows

न तो I और न ही II अनुसरण करता है

[Click Here to Challenge Question No.: 19](#)

Q.No: 19 Read the following statement carefully and identify the conclusion that follows.

Statement:
All actors are professionals. Some professionals are writers.

Conclusions:

- I. Some writers are actors.
II. Some actors are writers.

निम्नलिखित कथन को ध्यानपूर्वक पढ़ें और निष्कर्ष निकालें।

कथन:
सभी अभिनेता पेशेवर हैं। कुछ पेशेवर लेखक हैं।

- निष्कर्ष:
I. कुछ लेखक अभिनेता हैं।
II. कुछ अभिनेता लेखक हैं।

Only I follows

केवल I अनुसरण करता है

Only II follows

केवल II अनुसरण करता है

Both I and II follow

I और II दोनों अनुसरण करते हैं

Neither I nor II follows

न तो I और न ही II अनुसरण करता है

[Click Here to Challenge Question No.: 20](#)

Q.No: 20	Complete the series. 8, 13, 18, 23, __ निम्नलिखित श्रृंखला को पूरा करें। 8, 13, 18, 23, __	https://sscstudy.com/
	27	
	27	
	28	
	28	
	29	
	29	
	30	
	30	

[Click Here to Challenge Question No.: 21](#)

Q.No: 21	What comes next? ZA, YB, XC, ? निम्नलिखित श्रृंखला में अगले स्थान पर कौन सा विकल्प आएगा? ZA, YB, XC, ?
	VE
	VE
	WD
	WD
	UF
	UF
	TG
	TG

[Click Here to Challenge Question No.: 22](#)

Q.No: 22	Which of the following is different from the rest? A1, B2, C3, D4, E5, F7 निम्नलिखित में से कौन सा बाकी से अलग है? A1, B2, C3, D4, E5, F7
	D4
	D4
	E5
	E5
	F7
	F7
	C3
	C3

[Click Here to Challenge Question No.: 23](#)

Q.No: 23	If BIRD is written as AHQC, how is FISH written? अगर BIRD को AHQC लिखा जाता है, तो FISH को कैसे लिखा जाएगा?
----------	--

	EHRG
	EHRG
	EHSB
	EHSB
	GJTI
	GJTI
	EHRH
	EHRH

[Click Here to Challenge Question No.: 24](#)

Q.No: 24	Complete the series. 1, 4, 2, 8, 3, 12, 4, ? निम्नलिखित श्रृंखला को पूरा करें। 1, 4, 2, 8, 3, 12, 4, ?
	16
	16
	14
	14
	18
	18
	20
	20

[Click Here to Challenge Question No.: 25](#)

Q.No: 25	If DOG is coded as 4157, what is the code for BAT? अगर DOG को 4157 के रूप में कोड किया गया है, तो BAT के लिए कोड क्या है?
	2212
	2212
	2112
	2112
	2120
	2120
	2122
	2122

[Click Here to Challenge Question No.: 26](#)

Q.No: 26	What comes next? D4, W23, E5, V22, ? निम्नलिखित श्रृंखला में अगले स्थान पर कौन सा विकल्प आएगा? D4, W23, E5, V22, ?
	G6
	G6
	T20
	T20
	U21
	U21

[Click Here to Challenge Question No.: 27](#)

Q.No: 27 Find the ODD one out from the following options.

निम्नलिखित विकल्पों में से विषम विकल्प चुनिए।

Nagpur

नागपुर

Nashik

नासिक

Pune

पुणे

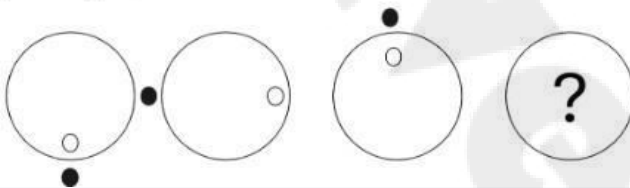
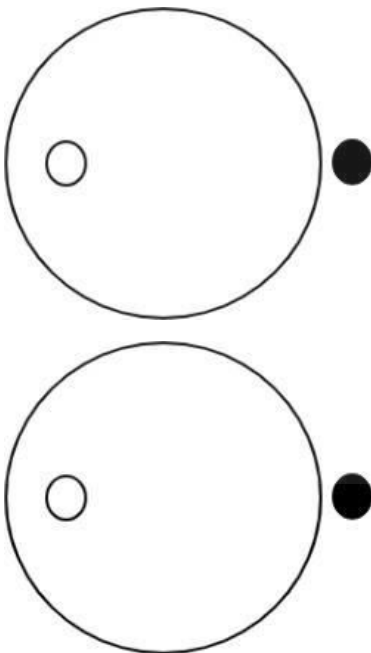
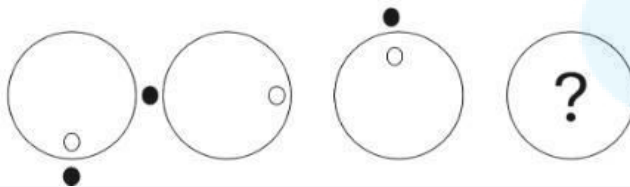
Bhopal

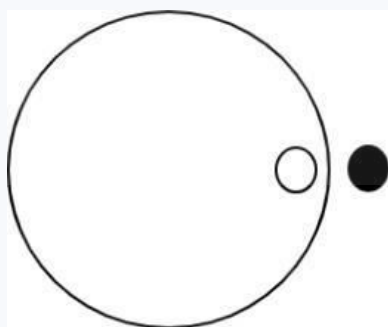
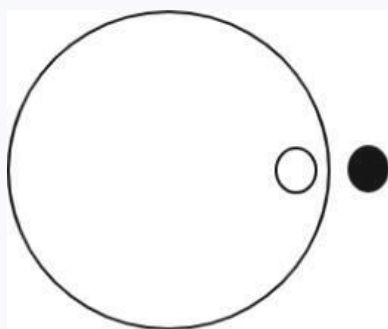
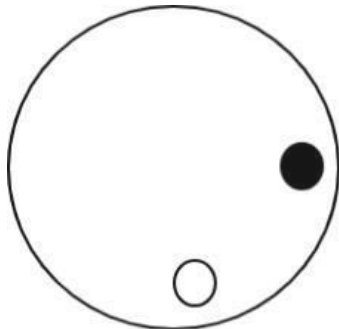
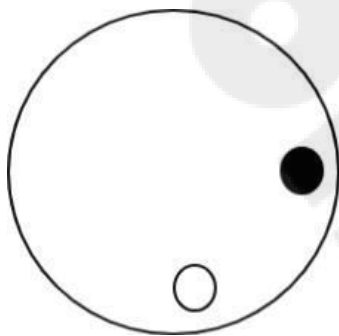
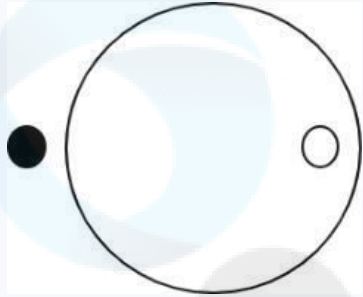
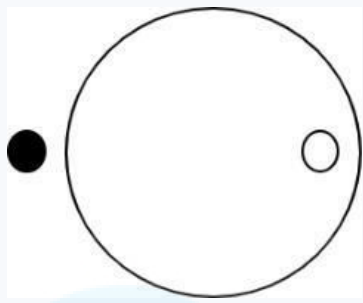
भोपाल

[Click Here to Challenge Question No.: 28](#)

Q.No: 28 Find the one which completes the series:

Question figure:

वह आकृति ज्ञात कीजिए जो श्रृंखला को पूरा करती है:
प्रश्न आकृति:



Q.No: 29 Figure 1 and 2 are related with each other in some particular way. Find the relationship and establish the same relationship between 3 and 4 from the given four alternatives.

Figure 1:

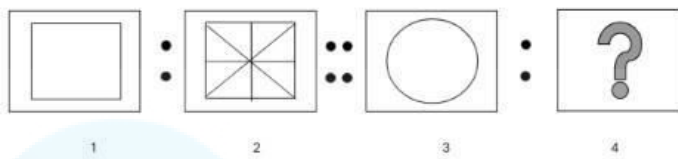
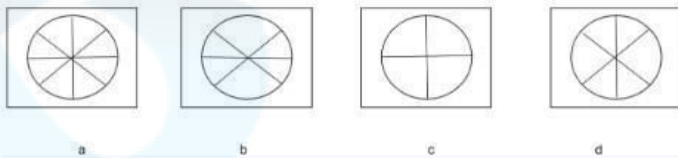


Figure 2:



आकृति 1 और 2 किसी विशेष तरीके से एक-दूसरे से संबंधित हैं। दिए गए चार विकल्पों में से 3 और 4 के बीच संबंध ज्ञात कीजिए और समान संबंध स्थापित कीजिए।

Figure 1:

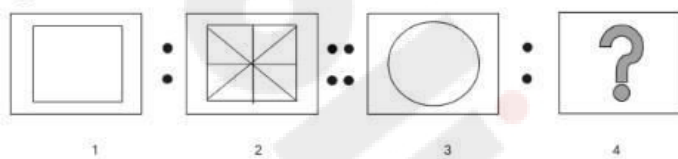
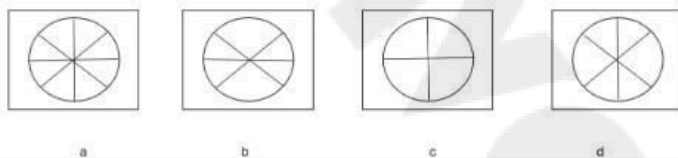


Figure 2:



A

A

B

B

C

C

D

D

Q.No: 30 Code: (1,2)(3,1)(2,4)(4,4) corresponds to which word?

	0	1	2	3	4
0	J	B	D	C	L
1	F	I	A	J	H
2	D	A	K	L	E
3	B	K	G	I	A
4	K	C	E	L	L

कोड: (1,2)(3,1)(2,4)(4,4) किस शब्द से मेल खाता है?

<https://sscstudy.com/>

	0	1	2	3	4
0	J	B	D	C	L
1	F	I	A	J	H
2	D	A	K	L	E
3	B	K	G	I	A
4	K	C	E	L	L

AKLE
AKLE

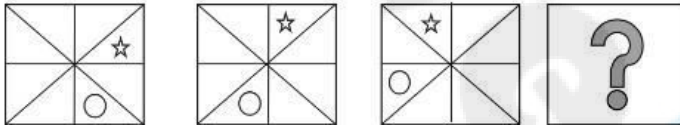
KAEL
KAEL

AKEL
AKEL

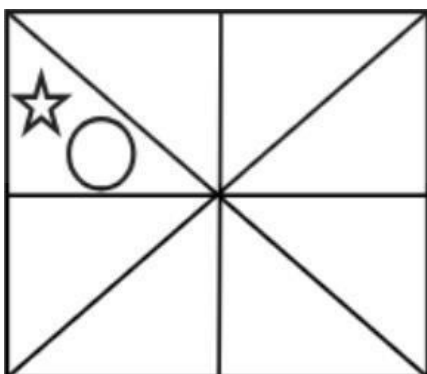
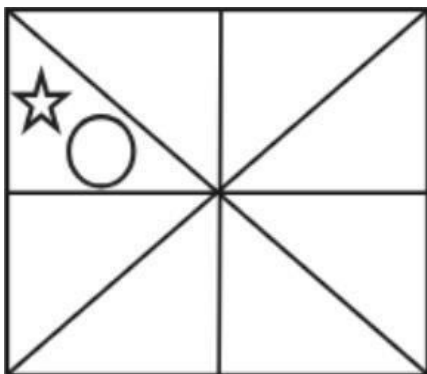
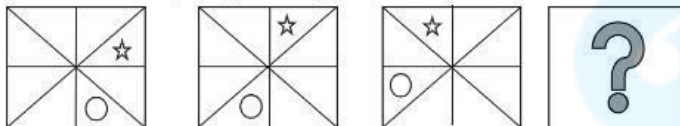
AKLL
AKLL

[Click Here to Challenge Question No.: 31](#)

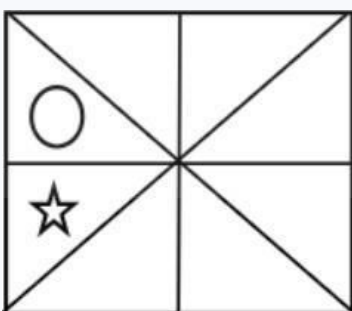
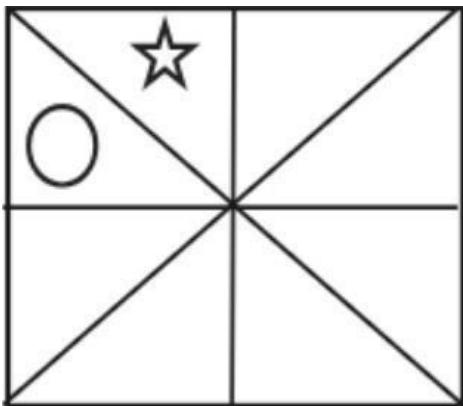
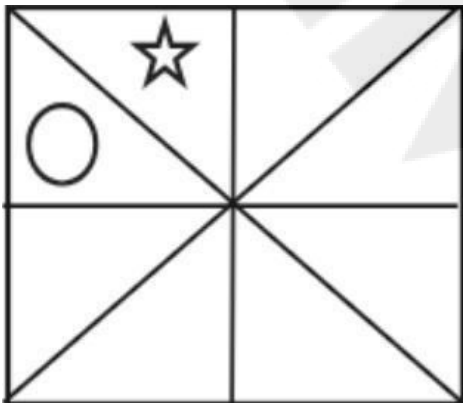
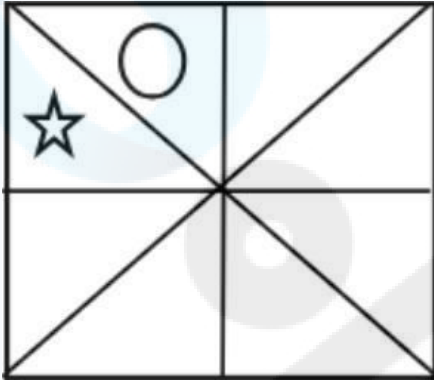
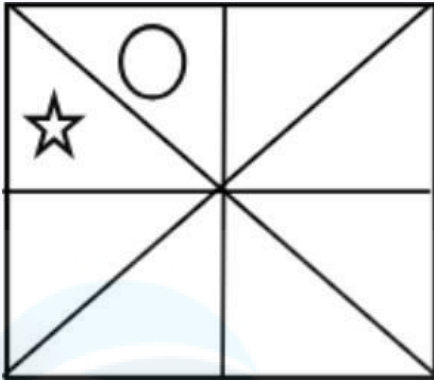
Q.No: 31 Find the one which completes the series:

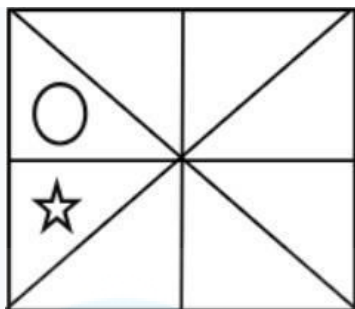


वह विकल्प ज्ञात कीजिए जो श्रृंखला को पूरा करता है:



<https://sscstudy.com/>




[Click Here to Challenge Question No.: 32](#)

Q.No: 32 The series given below contains a sequence of numbers. Accordingly identify the incorrect combination. 5, 10, 40, 46, 180, 185, 741

नीचे दी गई श्रृंखला में संख्याओं का एक अनुक्रम है। तदनुसार गलत संयोजन की पहचान कीजिए।
5, 10, 40, 46, 180, 185, 741

46, 741

46, 741

10, 46

10, 46

180, 741

180, 741

10, 180

10, 180

[Click Here to Challenge Question No.: 33](#)

Q.No: 33 Complete the analogy.

C : F :: E : ?

सादृश्य को पूर्ण कीजिए।

C : F :: E : ?

J

J

I

I

G

G

H

H

[Click Here to Challenge Question No.: 34](#)

Q.No: 34 Find the missing term in the series: E, L, S, Z, ?

निम्न श्रेणी में लुप्त पद ज्ञात कीजिए।

E, L, S, Z, ?

I

I

H

H

	F	https://sscstudy.com/
	F	
	G	
	G	

[Click Here to Challenge Question No.: 35](#)

Q.No: 35	Find the missing number in the series: 3, 7, 23, 95, ? निम्न श्रृंखला में लुप्त संख्या ज्ञात कीजिए। 3, 7, 23, 95, ?
	479
	479
	480
	480
	481
	481
	482
	482

[Click Here to Challenge Question No.: 36](#)

Q.No: 36	Complete the analogy. Biology : Science :: Music : ? सादृश्य पूरा कीजिए। जीव विज्ञान : विज्ञान :: संगीत : ?
	Art कला
	Voice आवाज़
	Composer संगीतकार
	Tune सुर

[Click Here to Challenge Question No.: 37](#)

Q.No: 37	Complete the analogy. Zenith : Nadir :: Success : ? सादृश्य पूरा करें। चरम : नादिर :: सफलता : ?
	Failure असफलता
	Objective उद्देश्य
	Gain पाना

[Click Here to Challenge Question No.: 38](#)

Q.No: 38 Select the option that does NOT belong to the same category as the others:

Ear, Eye, Nose, Hand

उस विकल्प का चयन कीजिए, जो अन्य विकल्पों की श्रेणी से संबंधित नहीं है।

कान, आंख, नाक, हाथ

Ear

कान

Hand

हाथ

Nose

नाक

Eye

आंख

[Click Here to Challenge Question No.: 39](#)

Q.No: 39 Find the odd one out in the given semantic series based on the pattern identified.

Green, Blue, White, Orange

पहचाने गए पैटर्न के आधार पर दी गई अर्थ श्रृंखला में से विषम को ज्ञात कीजिए।

हरा, नीला, सफेद, सतरी

Green

हरा

Blue

नीला

White

सफेद

Orange

संतरी

[Click Here to Challenge Question No.: 40](#)

Q.No: 40 Select the option that does NOT belong to the same category as the others:

<, >, =, #

उस विकल्प का चयन कीजिए जो अन्य तीन विकल्पों से संबंधित नहीं है।

<, >, =, #

<

<

>

>

=

=

#

#

[Click Here to Challenge Question No.: 41](#)

Q.No: 41	<p>Four friends live on Floors 1-4: A lives above C; B at the top; D below A but above C.</p> <p>Who is on floor 2?</p> <p>चार मित्र 1 से 4 तल पर रहते हैं: A, C के ऊपर रहता है; B सबसे ऊपर रहता है; D, A के नीचे लेकिन C के ऊपर रहता है।</p> <p>तल 2 पर कौन रहता है?</p>
	C
	C
	B
	B
	A
	A
	D
	D

[Click Here to Challenge Question No.: 42](#)

Q.No: 42	<p>Statement: "Bus fare will be reduced by 25% for students."</p> <p>Which assumption is implicit?</p> <p>कथन: "छात्रों के लिए बस किराया 25% कम किया जाएगा।"</p> <p>कौन सी धारणा निहित है?</p>
	All buses are overcrowded सभी बसें खचाखच भरी हैं
	Lower fares will encourage more students to travel by bus कम किराया अधिक छात्रों को बस से यात्रा करने के लिए प्रोत्साहित करेगा
	Student travel is officially discouraged छात्र यात्रा को आधिकारिक तौर पर हतोत्साहित किया गया है
	Students can afford current fares easily छात्र वर्तमान किराया आसानी से वहन कर सकते हैं

[Click Here to Challenge Question No.: 43](#)

Q.No: 43	<p>Statement: "The city will build multi-storey parking complexes to reduce illegal roadside parking."</p> <p>Which conclusion follows?</p> <p>कथन: "शहर में सड़क किनारे अवैध पार्किंग को कम करने के लिए बहुमंजिला पार्किंग परिसरों का निर्माण किया जाएगा।"</p> <p>कौन सा निष्कर्ष अनुसरण करता है?</p>
	All cars will now park in complexes अब सभी कारें परिसर में पार्क होंगी
	Illegal parking is a significant problem in the city शहर में अवैध पार्किंग एक गंभीर समस्या है
	Private parking will become free निजी पार्किंग फ्री हो जाएगी

Traffic jams are only due to parking
ट्रैफिक जाम केवल पार्किंग के कारण होता है

<https://sscstudy.com/>

[Click Here to Challenge Question No.: 44](#)

Q.No: 44	A friend fails an exam. What shows emotional intelligence? एक मित्र परीक्षा में असफल हो जाता है। भावनात्मक बुद्धिमत्ता क्या दर्शाती है?
	Celebrate your own success अपनी सफलता का जश्न मनाएं
	Offer help to prepare next time अगली बार तैयारी करने में मदद की पेशकश करें
	Say "It's your fault" कहो "यह तुम्हारी गलती है"
	Change the topic quickly जल्दी से विषय बदलो

[Click Here to Challenge Question No.: 45](#)

Q.No: 45	In dictionary order, which comes first? THRILL, THRESH, THRONE, THROB दिए गए शब्दों में से कौन-सा शब्द, शब्दकोश क्रम में पहले आता है? THRILL, THRESH, THRONE, THROB
	THRUSH THRUSH
	THRILL THRILL
	THROB THROB
	THRONE THRONE

[Click Here to Challenge Question No.: 46](#)

Q.No: 46	You see a co-worker violating a safety rule. What should you do? आप किसी सहकर्मी को सुरक्षा नियम का उल्लंघन करते हुए देखते हैं। आपको क्या करना चाहिए?
	Ignore if no harm yet अगर अभी तक कोई नुकसान न हो तो अनदेखा करें
	Report to the supervisor immediately पर्यवेक्षक को तुरंत रिपोर्ट करें
	Correct them politely on the spot उन्हें मौके पर ही विनम्रता से सुधारें

<https://sscstudy.com/>

[Click Here to Challenge Question No.: 47](#)

Q.No: 47	<p>In a sports club, men get full-time coaches but women get part-time coaches despite equal membership fees.</p> <p>Which inference is valid?</p> <p>एक स्पोर्ट्स क्लब में, पुरुषों को पूर्णकालिक कोच मिलते हैं, जबकि महिलाओं को समान सदस्यता शुल्क के बावजूद अंशकालिक कोच मिलते हैं।</p> <p>कौन सा अनुमान सही है?</p>
	<p>Women need less training</p> <p>महिलाओं को प्रशिक्षण की कम जरूरत होती है</p>
	<p>Male coaches work longer</p> <p>पुरुष कोच अधिक समय तक काम करते हैं</p>
	<p>Women's teams are stronger</p> <p>महिला टीमों में अधिक मजबूत हैं</p>
	<p>Possible gender bias in coaching allocation</p> <p>कोचिंग आवंटन में संभावित लिंग पूर्वाग्रह</p>

[Click Here to Challenge Question No.: 48](#)

Q.No: 48	<p>P is the father of Q, and R is the daughter of Q.</p> <p>How is R related to P</p> <p>P, Q का पिता है और R, Q की पुत्री है।</p> <p>R का P से क्या संबंध है?</p>
	<p>Granddaughter</p> <p>पोती/नातिन</p>
	<p>Grandmother</p> <p>दादी/नानी</p>
	<p>Uncle</p> <p>चाचा/मामा</p>
	<p>Brother</p> <p>भाई</p>

[Click Here to Challenge Question No.: 49](#)

Q.No: 49	<p>You are given a challenging assignment outside your expertise.</p> <p>What is the most emotionally intelligent attitude?</p> <p>आपको अपनी विशेषज्ञता से बाहर एक चुनौतीपूर्ण कार्य सौंपा गया है।</p> <p>सबसे भावनात्मक रूप से बुद्धिमान रवैया क्या है?</p>
	<p>Refuse due to discomfort</p> <p>असुविधा के कारण मना करना</p>
	<p>Accept and request help or training</p> <p>सहायता या प्रशिक्षण स्वीकार करें और अनुरोध करें</p>

	Complain about manager's decision प्रबंधक के निर्णय के बारे में शिकायत करें	https://sscstudy.com/
	Accept but hide difficulties स्वीकार करो लेकिन कठिनाइयों को छिपाओ	

Click Here to Challenge Question No.: 50		
Q.No: 50	Complete the analogy. JKL : MNO :: PQR : ? सादृश्य पूर्ण करें। JKL : MNO :: PQR : ?	
	STU STU	
	OPQ OPQ	
	UST UST	
	QPO QPO	



CANDIDATE RESPONSE SHEET/GRIEVANCE SYSTEM

[View Your Responses](#)[Click Here to View Grievance Questions](#)Admin loggedin. [[Logout](#)]

Roll No.

Exam Level :

Test Date : 10 Dec 2025

Test Time and Shift : 10:00 AM (Shift-1)

[Correct Option selected](#) [Wrong Option selected](#) [Correct Option](#) [Not Answered](#)[Save / Print](#)**Undertaking by the candidate :**

I acknowledge that this saved question paper is for my personal use and self-analysis only. I understand that sharing, distributing, or using it for commercial or any other purposes is strictly prohibited and may lead to legal action as per applicable acts, rules and regulations.

Note:

The candidates may note that in the challenge module the sequence of the questions and the options may be different from how it appeared during the examination. This is because in the challenge module the sequence of the questions as well as the answers will be the same for all the candidates who appeared in a particular shift while during the actual examination these sequences were different for different candidates. However the answer key selected by the candidates during the examination will exactly be reflected in the challenge module.

[Click Here for PART-A](#)[Click Here for PART-B](#)[Click Here for PART-C](#)[Click Here for PART-D](#)**PART-B (General Knowledge and General Awareness)**[Click Here to Challenge Question No.: 51](#)

Q.No: 51	Which international organization publishes air quality guidelines that many nations use as a reference? कौन सा अंतर्राष्ट्रीय संगठन वायु गुणवत्ता संबंधी दिशानिर्देश प्रकाशित करता है, जिनका उपयोग कई देश संदर्भ के रूप में करते हैं?
	United Nations Educational, Scientific and Cultural Organization (UNESCO) संयुक्त राष्ट्र शैक्षिक, वैज्ञानिक और सांस्कृतिक संगठन (यूनेस्को)
	World Health Organization (WHO) विश्व स्वास्थ्य संगठन (डब्ल्यूएचओ)
	International Monetary Fund (IMF) अंतर्राष्ट्रीय मुद्रा कोष (आईएमएफ)
	World Trade Organization (WTO) विश्व व्यापार संगठन (डब्ल्यूटीओ)

[Click Here to Challenge Question No.: 52](#)

Q.No: 52	The title "Zinda Pir" or "Living Saint" was attributed to: "जिंदा पीर" या "जीवित संत" की उपाधि किसे दी गई:
----------	---

	Akbar अकबर	https://sscstudy.com/
	Aurangzeb औरंगजेब	
	Babur बाबर	
	Jahangir जहांगीर	

[Click Here to Challenge Question No.: 53](#)

Q.No: 53	The Chola inscription at Uttaramerur is primarily concerned with: उत्तरमेरुर स्थित चोल शिलालेख मुख्यतः निम्नलिखित से संबंधित है:
	Maritime trade समुद्री व्यापार
	Military conquest सैन्य विजय
	Temple rituals मंदिर अनुष्ठान
	Village administration ग्राम प्रशासन

[Click Here to Challenge Question No.: 54](#)

Q.No: 54	Which constitutional amendment granted constitutional status to Panchayati Raj institutions? किस संविधान संशोधन द्वारा पंचायती राज संस्थाओं को संवैधानिक दर्जा प्रदान किया गया?
	42nd Amendment 42वां संशोधन
	52nd Amendment 52वां संशोधन
	99th Amendment 99वां संशोधन
	73rd Amendment 73वां संशोधन

[Click Here to Challenge Question No.: 55](#)

Q.No: 55	Which athlete's victory marked India's inaugural gold medal moment in the Youth Olympics? किस एथलीट की जीत ने युवा ओलंपिक में भारत के लिए पहला स्वर्ण पदक जीता?
	Neeraj Chopra नीरज चोपड़ा
	Manu Bhaker मनु भाकर
	Jeremy Lalrinnunga जेरेमी लालरिनुंगा
	Lovlina Borgohain

<https://sscstudy.com/>

[Click Here to Challenge Question No.: 56](#)

Q.No: 56 Where were the 2008 Commonwealth Youth Games primarily hosted?

2008 राष्ट्रमंडल युवा खेल मुख्यतः कहाँ आयोजित किये गये थे?

Chennai

चेन्नई

Delhi

दिल्ली

Hyderabad

हैदराबाद

Pune

पुणे

[Click Here to Challenge Question No.: 57](#)

Q.No: 57 In which of the following shapes is the famous Sun Temple at Konark designed?

कोणार्क का प्रसिद्ध सूर्य मंदिर निम्नलिखित में से किस आकार में बनाया गया है?

A lotus flower

एक कमल का फूल

A gigantic chariot

एक विशाल रथ

A circular stupa

एक गोलाकार स्तूप

A reclining deity

एक लेटे हुए देवता

[Click Here to Challenge Question No.: 58](#)

Q.No: 58 Which Indo-European style combined Gothic, Mughal, and Hindu features during the colonial era?

औपनिवेशिक युग के दौरान किस इंडो-यूरोपीय शैली ने गोथिक, मुगल और हिंदू विशेषताओं को संयोजित किया?

Indo-Saracenic

इंडो-सरसेनिक

Colonial Baroque

औपनिवेशिक बारोक

Dravidian Revival

द्रविड़ पुनरुद्धार

Mughal-Gothic

मुगल-गॉथिक

[Click Here to Challenge Question No.: 59](#)

Q.No: 59 Which Norwegian author won the Nobel Prize in Literature in 2023 for his innovative plays and prose?

किस नॉर्वेजियन लेखक ने अपने अभिनव नाटकों और गद्य के लिए 2023 में साहित्य का नोबेल पुरस्कार जीता?

	Karl Ove Knausgard कार्ल ओवे नॉसगार्ड	https://sscstudy.com/
	Jon Fosse जॉन फॉसे	
	Per Petterson पर पीटरसन	
	Erlend Loe एर्लेंड लो	

Click Here to Challenge Question No.: 60		
Q.No: 60	Which sport's terminology includes "Queen's Gambit"? किस खेल की शब्दावली में "क्वींस गैम्बिट" शामिल है?	
	Kho-Kho खो-खो	
	Tennis टेनिस	
	Chess शतरंज	
	Kabaddi कबड्डी	

Click Here to Challenge Question No.: 61		
Q.No: 61	Which celebration in Andhra Pradesh and Telangana signifies the start of the harvest season and the official start of the New Year? आंध्र प्रदेश और तेलंगाना में कौन सा उत्सव फसल के मौसम की शुरुआत और नए साल की आधिकारिक शुरुआत का प्रतीक है?	
	Sankranti संक्रांति	
	Bathukamma बथुकम्मा	
	Pongal पोंगल	
	Ugadi उगादी	

Click Here to Challenge Question No.: 62		
Q.No: 62	"Lezim" is a folk dance from which state? "लेज़िम" किस राज्य का लोक नृत्य है?	
	Goa गोवा	
	Maharashtra महाराष्ट्र	
	Rajasthan राजस्थान	
	Punjab पंजाब	

[Click Here to Challenge Question No.: 63](#)

Q.No: 63	What is the primary source of Kathakali's dramatic stories? कथकली की नाटकीय कहानियों का प्राथमिक स्रोत क्या है?
	Folk tales लोक कथाएं
	Indian epics भारतीय महाकाव्य
	Local legends स्थानीय किंवदंतियाँ
	Historical events ऐतिहासिक घटनाएँ

[Click Here to Challenge Question No.: 64](#)

Q.No: 64	Which of the following rulers founded the Nalanda University? निम्नलिखित में से किस शासक ने नालंदा विश्वविद्यालय की स्थापना की थी?
	Chandragupta Maurya चन्द्रगुप्त मौर्य
	Chandragupta I चन्द्रगुप्त I
	Sri Gupta श्री गुप्ता
	Kumaragupta I कुमारगुप्त I

[Click Here to Challenge Question No.: 65](#)

Q.No: 65	The famous Chinese pilgrim, Fahien visited India during the reign of _____. प्रसिद्ध चीनी तीर्थयात्री फाहियान ने _____ के शासनकाल के दौरान भारत का दौरा किया था।
	Chandragupta II चन्द्रगुप्त II
	Kumaragupta कुमारगुप्त
	Samudragupta समुद्रगुप्त
	Chandragupta I चन्द्रगुप्त I

[Click Here to Challenge Question No.: 66](#)

Q.No: 66	Which one of these classical musicians is credited with popularizing the sitar in the global music scene? इनमें से किस शास्त्रीय संगीतकार को वैश्विक संगीत परिदृश्य में सितार को लोकप्रिय बनाने का श्रेय दिया जाता है?
----------	---

Pandit Ravi Shankar पंडित रविशंकर	
Ustad Vilayat Khan उस्ताद विलायत खान	
Pandit Nikhil Banerjee पंडित निखिल बनर्जी	
Ustad Allauddin Khan उस्ताद अलाउद्दीन खान	

[Click Here to Challenge Question No.: 67](#)

Q.No: 67	Which of these is true about Bandi Chhor Divas? बंदी छोड़ दिवस के बारे में इनमें से कौन सा कथन सत्य है?
	Commemorates Guru Hargobind's release with 52 kings. यह दिन गुरु हरगोबिंद जी की 52 राजाओं के साथ रिहाई की याद दिलाता है।
	It marks the martyrdom of Guru Arjan Dev during Mughal rule. यह मुगल शासन के दौरान गुरु अर्जुन देव की शहादत का प्रतीक है।
	The festival involves fasting and silence throughout the day. इस त्यौहार में पूरे दिन उपवास और मौन रहना शामिल है।
	Celebrated only at Golden Temple without any street processions. यह उत्सव केवल स्वर्ण मंदिर में मनाया जाता है, बिना किसी सड़क जुलूस के।

[Click Here to Challenge Question No.: 68](#)

Q.No: 68	Which of the following statements about traditional and semi-classical Indian music forms are correct ? 1) Kajri is sung by women in Uttar Pradesh during the monsoon, often with night-long group dancing. 2) Qawwali, introduced by Turkish Sufis, is performed only as solo singing without chorus. 3) Tappa from Punjab features rapid, jumpy notes inspired by camel riders' songs. 4) Amir Khusro helped shape Qawwali in India as a Sufi devotional form. पारंपरिक और अर्ध-शास्त्रीय भारतीय संगीत शैलियों के बारे में निम्नलिखित में से कौन सा कथन सही है? 1. कजरी उत्तर प्रदेश में महिलाओं द्वारा वर्षा ऋतु में गाई जाती है, जिसमें अक्सर रातभर सामूहिक नृत्य होता है। 2. कव्वाली, जो तुर्की सूफियों द्वारा प्रस्तुत की गई थी, केवल एकल गायन के रूप में होती है और इसमें कोरस नहीं होता। 3. टप्पा, जो पंजाब से उत्पन्न हुआ, ऊँची और फुर्तीली तानों से युक्त होता है और ऊँट चालकों के गीतों से प्रेरित है। 4. अमीर खुसरो ने भारत में कव्वाली को एक सूफी भक्ति संगीत शैली के रूप में व
	1, 2 and 3 only केवल 1, 2 और 3
	1, 3 and 4 only केवल 1, 3 और 4
	2, 3 and 4 only केवल 2, 3 और 4
	1, 2 and 4 only केवल 1, 2 और 4

[Click Here to Challenge Question No.: 69](#)

Q.No: 69	<p>Read the below statements about Indian Sports Infrastructure:</p> <ol style="list-style-type: none"> 1. The Sports Authority of India was established in 1985. 2. National Sports University is located in Manipur. 3. The Army Sports Institute is based in Pune. <p>Which of these statements are correct?</p> <p>भारतीय खेल अवसंरचना के बारे में नीचे दिए गए कथनों को पढ़ें:</p> <ol style="list-style-type: none"> 1. भारतीय खेल प्राधिकरण की स्थापना 1985 में हुई थी। 2. राष्ट्रीय खेल विश्वविद्यालय मणिपुर में स्थित है। 3. सेना खेल संस्थान पुणे में स्थित है। <p>इनमें से कौन सा कथन सही है?</p>
	<p>Only 1 and 2 are Correct</p> <p>केवल 1 और 2 सही हैं</p>
	<p>Only 2 and 3 are Correct</p> <p>केवल 2 और 3 सही हैं</p>
	<p>Only 1 and 3 are correct</p> <p>केवल 1 और 3 सही हैं</p>
	<p>1, 2 and 3 are Correct</p> <p>1, 2 और 3 सही हैं</p>

[Click Here to Challenge Question No.: 70](#)

Q.No: 70	<p>In 1916, two major political groups in India came together to present a united front to the British. Which organizations signed this historic agreement, known as the Lucknow Pact?</p> <p>1916 में भारत के दो प्रमुख राजनीतिक समूह अंग्रेजों के सामने एकजुट होकर सामने आए। लखनऊ समझौते के नाम से प्रसिद्ध इस ऐतिहासिक समझौते पर किन संगठनों ने हस्ताक्षर किए थे?</p>
	<p>Indian National Congress and Swaraj Party</p> <p>भारतीय राष्ट्रीय कांग्रेस और स्वराज पार्टी</p>
	<p>All-India Muslim League and Khilafat Committee</p> <p>अखिल भारतीय मुस्लिम लीग और खिलाफत समिति</p>
	<p>Indian National Congress and Muslim League</p> <p>भारतीय राष्ट्रीय कांग्रेस और मुस्लिम लीग</p>
	<p>Hindu Mahasabha and Indian National Congress</p> <p>हिंदू महासभा और भारतीय राष्ट्रीय कांग्रेस</p>

[Click Here to Challenge Question No.: 71](#)

Q.No: 71	<p>What was the primary focus of the 1812 House of Commons Committee before the renewal of the East India Company's Charter in 1813?</p> <p>1813 में ईस्ट इंडिया कंपनी के चार्टर के नवीनीकरण से पहले 1812 हाउस ऑफ कॉमन्स समिति का प्राथमिक फोकस क्या था?</p>
	<p>Trade monopoly and foreign policy</p> <p>व्यापार एकाधिकार और विदेश नीति</p>
	<p>Land revenue collection in Bengal</p> <p>बंगाल में भू-राजस्व संग्रह</p>
	<p>Judicial and police administration in India</p> <p>भारत में न्यायिक और पुलिस प्रशासन</p>
	<p>Military expenditure in frontier regions</p> <p>सीमावर्ती क्षेत्रों में सैन्य व्यय</p>

Q.No: 72	'The God of Small Things' won the Booker Prize in which year? 'द गॉड ऑफ स्मॉल थिंग्स' ने किस वर्ष बुकर पुरस्कार जीता?
	1995
	1995
	1997
	1997
	1999
	1999
	2001
	2001

Not Answered

Q.No: 73	Who won the men's and women's singles titles at the Senior National Badminton Championships 2024 held in Bengaluru? बेंगलुरु में आयोजित सीनियर नेशनल बैडमिंटन चैंपियनशिप 2024 में पुरुष और महिला एकल खिताब किसने जीता?
	Lakshya Sen and PV Sindhu लक्ष्य सेन और पीवी सिंधु
	H.S. Prannoy and Saina Nehwal एच.एस. प्रणय और साइना नेहवाल
	Kidambi Srikanth and Ashmita Chaliha किदांबी श्रीकांत और अश्मिता चालिहा
	M Raghu and Devika Sihag एम रघु और देविका सिहाग

Q.No: 74	From the given renowned personalities, which one was posthumously awarded the Padma Vibhushan in 2025 in the field of Literature and Education? दी गई प्रसिद्ध हस्तियों में से किसे साहित्य और शिक्षा के क्षेत्र में 2025 में मरणोपरांत पद्म विभूषण से सम्मानित किया गया?
	Jagdish Singh Khehar जगदीश सिंह खेहर
	Kumudini Lakhia कुमुदिनी लाखिया
	M. T. Vasudevan Nair एम.टी.वासुदेवन नायर
	D. Nageshwara Reddy डी. नागेश्वर रेड्डी

Not Answered

Q.No: 75	The Himachal range includes famous hill stations and valleys such as: हिमाचल पर्वतमाला में प्रसिद्ध हिल स्टेशन और घाटियाँ शामिल हैं:
----------	---

	Munnar and Nilgiris मुन्नार और नीलगिरी	https://sscstudy.com/
	Ladakh and Nubra लद्दाख और नुबरा	
	Kullu, Kangra, and Kashmir कुल्लू, कांगड़ा और कश्मीर	
	Darjeeling and Siliguri दार्जिलिंग और सिलीगुड़ी	

[Click Here to Challenge Question No.: 76](#)

Q.No: 76	Who has been appointed as the Chief Justice of India with effect from May 14, 2025? 14 मई, 2025 से भारत के मुख्य न्यायाधीश के रूप में किसे नियुक्त किया गया है?
	Shri Justice Sanjiv Khanna न्यायमूर्ति श्री संजीव खन्ना
	Shri Justice D.Y. Chandrachud न्यायमूर्ति श्री डी.वाई. चंद्रचूड़
	Shri Justice Bhushan Ramkrishna Gavai श्री न्यायमूर्ति भूषण रामकृष्ण गवई
	Shri Justice U.U. Lalit न्यायमूर्ति श्री यू.यू. ललित

[Click Here to Challenge Question No.: 77](#)

Q.No: 77	<p>Read the following Assertion (A) and Reason (R) carefully and choose the correct option:</p> <p>Assertion (A): The northeastern extension of the Deccan Plateau is known for distinct hill ranges like the Garo, Khasi, and Jaintia Hills.</p> <p>Reason (R): These hills are part of the Chotanagpur Plateau, from which they are separated by a geological fault.</p> <p>निम्नलिखित अभिकथन (A) और कारण (R) को ध्यानपूर्वक पढ़ें और सही विकल्प चुनें:</p> <p>अभिकथन (A): दक्कन पठार का उत्तर-पूर्वी विस्तार गारो, खासी और जयंतिया पहाड़ियों जैसी विशिष्ट पर्वत श्रृंखलाओं के लिए जाना जाता है।</p> <p>कारण (R): ये पहाड़ियाँ छोटानागपुर पठार का हिस्सा हैं, जिससे ये एक भूगर्भीय भ्रंश द्वारा अलग होती हैं।</p>
	Both A and R are true, and R is the correct explanation of A A और R दोनों सत्य हैं, और R, A का सही स्पष्टीकरण है
	Both A and R are true, but R is not the correct explanation of A A और R दोनों सत्य हैं, लेकिन R, A का सही स्पष्टीकरण नहीं है
	A is true, but R is false A सत्य है, लेकिन R असत्य है
	A is false, but R is true A असत्य है, लेकिन R सत्य है

[Click Here to Challenge Question No.: 78](#)

Q.No: 78	According to Census 2011, which state had the lowest population density in India? जनगणना 2011 के अनुसार भारत में किस राज्य का जनसंख्या घनत्व सबसे कम था?
	Sikkim सिक्किम
	Nagaland

<https://sscstudy.com/>

	नगालैंड	https://sscstudy.com/
	Arunachal Pradesh अरुणाचल प्रदेश	
	Meghalaya मेघालय	

[Click Here to Challenge Question No.: 79](#)

Q.No: 79	Fill in the Blanks: NISAR satellite carries dual-frequency radar bands ____ and ____. रिक्त स्थान भरें: NISAR उपग्रह में द्वि-आवृत्ति रडार बैंड ____ और ____ हैं।
	X & C X और C
	Ka & Ku Ka और Ku
	L & S L और S
	VHF & UHF VHF और UHF

[Click Here to Challenge Question No.: 80](#)

Q.No: 80	Assertion (A) and Reason (R) are given below. Choose the correct option: Assertion (A): The death rate measures the number of deaths per 100 people in a population. Reason (R): Death rate helps track the health and mortality trends in a region. नीचे अभिकथन (A) और कारण (R) दिए गए हैं। सही विकल्प चुनें: अभिकथन (A): मृत्यु दर किसी जनसंख्या में प्रति 100 व्यक्तियों पर होने वाली मौतों की संख्या को मापती है। कारण (R): मृत्यु दर किसी क्षेत्र में स्वास्थ्य और मृत्यु दर के रुझानों को ट्रैक करने में मदद करती है।
	Both A and R are true, and R is the correct explanation of A A और R दोनों सत्य हैं, और R, A का सही स्पष्टीकरण है
	Both A and R are true, but R is not the correct explanation A और R दोनों सत्य हैं, लेकिन R सही स्पष्टीकरण नहीं है
	A is true, but R is false A सत्य है, लेकिन R असत्य है
	A is false, but R is true A असत्य है, लेकिन R सत्य है

[Click Here to Challenge Question No.: 81](#)

Q.No: 81	Which four metro cities are connected by India's Golden Quadrilateral highway network? भारत के स्वर्णिम चतुर्भुज राजमार्ग नेटवर्क से कौन से चार मेट्रो शहर जुड़े हुए हैं?
	Bengaluru, Chennai, Hyderabad, Kochi बेंगलुरु, चेन्नई, हैदराबाद, कोच्ची
	Delhi, Mumbai, Chennai, Kolkata दिल्ली, मुंबई, चेन्नई, कोलकाता
	Ahmedabad, Pune, Nagpur, Bhubaneswar अहमदाबाद, पुणे, नागपुर, भुवनेश्वर

[Click Here to Challenge Question No.: 82](#)

Q.No: 82	Why has ISRO proposed the development of a third launch pad beyond the existing facilities at Sriharikota? इसरो ने श्रीहरिकोटा में मौजूदा सुविधाओं के अलावा तीसरे लॉन्च पैड के विकास का प्रस्ताव क्यों रखा है?
	To serve exclusively as a data relay hub for enhancing satellite telemetry उपग्रह टेलीमेट्री को बढ़ाने के लिए विशेष रूप से डेटा रिले हब के रूप में कार्य करना
	To accommodate space tourism missions under future commercial programmes भविष्य के वाणिज्यिक कार्यक्रमों के अंतर्गत अंतरिक्ष पर्यटन मिशनों को शामिल करना
	To provide backup support in case of emergency ground failures during launches प्रक्षेपण के दौरान आपातकालीन जमीनी विफलताओं के मामले में बैकअप सहायता प्रदान करना
	To handle increasing launch frequency and capacity for missions involving SSLV, Gaganyaan, and commercial payloads एसएसएलवी, गगनयान और वाणिज्यिक पेलोड से जुड़े मिशनों के लिए बढ़ती प्रक्षेपण आवृत्ति और क्षमता को संभालना

[Click Here to Challenge Question No.: 83](#)

Q.No: 83	<p>Read the following statements marked as Assertion (A) and Reason (R). Choose the correct option.</p> <p>Assertion (A): Liquid Oxygen-Methane (LOX-Meth) has been chosen as the preferred propellant combination for India's Next-Generation Launch Vehicle (NGLV).</p> <p>Reason (R): LOX-Meth offers advantages such as cleaner combustion for engine reusability, relatively simpler propellant tank designs compared to LOX-Hydrogen, and a lower overall operational cost than kerosene due to reduced engine refurbishment.</p> <p>अभिकथन (A) और कारण (R) से चिह्नित निम्नलिखित कथनों को पढ़ें। सही विकल्प चुनें।</p> <p>अभिकथन (A): द्रव ऑक्सीजन-मीथेन (LOX-Meth) को भारत के अगली पीढ़ी के प्रक्षेपण यान (NGLV) के लिए पसंदीदा प्रणोदक संयोजन के रूप में चुना गया है।</p> <p>कारण (R): LOX-Meth इंजन के पुनः प्रयोज्यता के लिए स्वच्छ दहन, LOX-हाइड्रोजन की तुलना में अपेक्षाकृत सरल प्रणोदक टैंक डिज़ाइन और कम इंजन नवीनीकरण के कारण केरोसिन की तुलना में कम समग्र परिचालन लागत जैसे लाभ प्रदान करता है।</p>
	Both A and R are true, and R is the correct explanation of A A और R दोनों सत्य हैं, और R, A का सही स्पष्टीकरण है
	Both A and R are true, but R is not the correct explanation of A A और R दोनों सत्य हैं, लेकिन R, A का सही स्पष्टीकरण नहीं है
	A is true, but R is false A सत्य है, लेकिन R असत्य है
	A is false, but R is true A असत्य है, लेकिन R सत्य है

[Click Here to Challenge Question No.: 84](#)

Q.No: 84	Which of the following biomolecules is most abundant in plant cell walls? निम्नलिखित में से कौन सा जैव अणु पादप कोशिका भित्ति में सबसे अधिक प्रचुर मात्रा में पाया जाता है?
	Cellulose सेल्यूलोज
	Pectin पेक्टिन
	Lignin लिग्निन

[Click Here to Challenge Question No.: 85](#)

Q.No: 85 Given four enzymes:
1. DNA polymerase
2. Ligase
3. Helicase
4. Peptidase.
Which are directly involved in DNA replication?
चार एंजाइम दिए गए हैं:
1. डीएनए पॉलीमरेज़
2. लाइगेज़
3. हेलीकेज़
4. पेप्टिडेज़।
कौन से एंजाइम डीएनए प्रतिकृति में सीधे तौर पर शामिल होते हैं?

1 and 2
1 और 2

2 and 4
2 और 4

1, 2 and 3
1, 2 और 3

3 and 4
3 और 4

Not Answered

[Click Here to Challenge Question No.: 86](#)

Q.No: 86 The Bharatiya Nagarik Suraksha Sanhita(BNSS) allows for trials to proceed in the absence of the accused in certain circumstances. This provision applies specifically to:
भारतीय नागरिक सुरक्षा संहिता (बीएनएसएस) कुछ परिस्थितियों में अभियुक्त की अनुपस्थिति में भी मुकदमा चलाने की अनुमति देती है। यह प्रावधान विशेष रूप से निम्नलिखित पर लागू होता है:

Any accused person who fails to appear.
कोई भी आरोपी व्यक्ति जो उपस्थित होने में विफल रहता है।

Only foreign nationals.
केवल विदेशी नागरिक।

Proclaimed offenders who abscond.
फरार घोषित अपराधी।

Accused persons who are gravely ill.
आरोपी व्यक्ति जो गंभीर रूप से बीमार हैं।

[Click Here to Challenge Question No.: 87](#)

Q.No: 87 What is the maximum period of imprisonment that can be given in a summary trial under the Bharatiya Nagarik Suraksha Sanhita (BNSS), 2023, irrespective of the punishment specified for the offence?
भारतीय नागरिक सुरक्षा संहिता (बीएनएसएस), 2023 के तहत संक्षिप्त सुनवाई में अपराध के लिए निर्दिष्ट सजा के बावजूद कारावास की अधिकतम अवधि क्या हो सकती है?

1 months
1 माह

	3 months 3 माह	https://sscstudy.com/
	12 months 12 माह	
	24 months 24 माह	

Click Here to Challenge Question No.: 88		
Q.No: 88	e-NAM is primarily aimed at which of the following? ई-एनएएम का मुख्य उद्देश्य निम्नलिखित में से कौन सा है?	
	Farm insurance कृषि बीमा	
	Online crop procurement ऑनलाइन फसल खरीद	
	National digital market राष्ट्रीय डिजिटल बाजार	
	Agro-export facilitation कृषि-निर्यात सुविधा	

Click Here to Challenge Question No.: 89		
Q.No: 89	<p>Consider the following statements about Nutrient Based Subsidy (NBS) scheme:</p> <p>(1) The NBS scheme provides fixed per-kg subsidy rates for N, P, K, and S in non-urea fertilizers.</p> <p>(2) Freight assistance is also provided.</p> <p>Which of the above statements is/are correct?</p> <p>पोषक तत्व आधारित सब्सिडी (एनबीएस) योजना के बारे में निम्नलिखित कथनों पर विचार कीजिए:</p> <p>(1) एनबीएस योजना गैर-यूरिया उर्वरकों में नाइट्रोजन, फास्फोरस, पोटेशियम और पोटेशियम के लिए प्रति किलोग्राम निश्चित सब्सिडी दर प्रदान करती है।</p> <p>(2) माल ढुलाई सहायता भी प्रदान की जाती है।</p> <p>उपरोक्त कथनों में से कौन सा/से सही है/हैं?</p>	
	Only 1 केवल 1	
	Only 2 केवल 2	
	Both 1 and 2 1 और 2 दोनों	
	Neither 1 nor 2 न तो 1 और न ही 2	

Click Here to Challenge Question No.: 90		
Q.No: 90	<p>The Global Liveability Index 2025, a form of Global Cities Index, is published by which organization?</p> <p>ग्लोबल लिवेबिलिटी इंडेक्स 2025, ग्लोबल सिटीज इंडेक्स का एक रूप, किस संगठन द्वारा प्रकाशित किया जाता है?</p>	
	PWC पीडब्ल्यूसी	
	EIU ईआईयू	

	KPMG केपीएमजी	https://sscstudy.com/
	World Economic Forum विश्व आर्थिक मंच	
Not Answered		

Click Here to Challenge Question No.: 91		
Q.No: 91	Mario de Miranda, known for his cartoons and sketches, hailed from which Indian state? मारियो डी मिरांडा, जो अपने कार्टून और रेखाचित्रों के लिए जाने जाते हैं, किस भारतीय राज्य से थे?	
	Kerala केरल	
	Goa गोवा	
	Maharashtra महाराष्ट्र	
	Karnataka कर्नाटक	
Not Answered		

Click Here to Challenge Question No.: 92		
Q.No: 92	What is the impact of PSU disinvestment on the government's financial structure? पीएसयू विनिवेश का सरकार की वित्तीय संरचना पर क्या प्रभाव पड़ता है?	
	It increases government's liabilities इससे सरकार की देनदारियां बढ़ जाती हैं	
	It reduces government's financial assets यह सरकार की वित्तीय परिसंपत्तियों को कम करता है	
	It increases the government's earnings permanently इससे सरकार की कमाई स्थायी रूप से बढ़ जाती है	
	It does not affect finances at all इसका वित्त पर कोई प्रभाव नहीं पड़ता	

Click Here to Challenge Question No.: 93		
Q.No: 93	<p>Consider the following statements and choose the correct option:</p> <p>Statement 1: A surplus on the current account indicates that the country is lending to the rest of the world.</p> <p>Statement 2: A current account is said to be in balance when payments exceed receipts.</p> <p>निम्नलिखित कथनों पर विचार कीजिए और सही विकल्प चुनिए:</p> <p>कथन 1: चालू खाते पर अधिशेष यह दर्शाता है कि देश शेष विश्व को उधार दे रहा है।</p> <p>कथन 2: चालू खाते को तब शेष राशि वाला कहा जाता है जब भुगतान प्राप्तियों से अधिक हो।</p>	
	Only Statement 1 is correct केवल कथन 1 सही है	
	Only Statement 2 is correct केवल कथन 2 सही है	
	Both Statement 1 and Statement 2 are correct कथन 1 और कथन 2 दोनों सही हैं	

[Click Here to Challenge Question No.: 94](#)

Q.No: 94 Which year marked the beginning of India's First Five-Year Plan?

भारत की प्रथम पंचवर्षीय योजना की शुरुआत किस वर्ष हुई?

1949

1949

1950

1950

1951

1951

1952

1952

[Click Here to Challenge Question No.: 95](#)

Q.No: 95 Read the following statements and mark the correct option:

Assertion (A): Subramaniya Siva edited the nationalist journal 'Gnanabhanu' in Tamil Nadu.**Reason (R):** He was the first Indian to be arrested under the Rowlatt Act.**निम्नलिखित कथनों को पढ़िए और सही विकल्प पर निशान लगाइए:****कथन (A):** सुब्रमण्य शिव ने तमिलनाडु में राष्ट्रवादी पत्रिका 'ज्ञानभानु' का संपादन किया।**कारण (R):** वह रौलट एक्ट के तहत गिरफ्तार होने वाले पहले भारतीय थे।

Both A and R are true, and R is the correct explanation of A.

A और R दोनों सत्य हैं, तथा R, A का सही स्पष्टीकरण है।

Both A and R are true, but R is not the correct explanation of A.

A और R दोनों सत्य हैं, लेकिन R, A का सही स्पष्टीकरण नहीं है।

A is true, but R is false.

A सत्य है, लेकिन R असत्य है।

A is false, but R is true.

A असत्य है, लेकिन R सत्य है।

[Click Here to Challenge Question No.: 96](#)Q.No: 96 Which of the following pairs **correctly** represent light industries?

निम्नलिखित में से कौन सा युग्म हल्के उद्योगों का सही प्रतिनिधित्व करता है?

Oil and Shipbuilding

तेल और जहाज निर्माण

Knitting needles and Electric bulbs

बुनाई सुइयाँ और बिजली के बल्ब

Automobile and Brassware

ऑटोमोबाइल और पीतल के बर्तन

Sewing machines and Shipbuilding

सिलाई मशीनें और जहाज निर्माण

Q.No: 97	<p>Read the following Assertion (A) and Reason (R) carefully and choose the correct option.</p> <p>Assertion (A): The Green Revolution led to regional imbalances in agricultural growth.</p> <p>Reason (R): HYV technology and irrigation facilities were initially available only in select states.</p> <p>निम्नलिखित अभिकथन (A) और कारण (R) को ध्यानपूर्वक पढ़ें और सही विकल्प चुनें।</p> <p>अभिकथन (A): हरित क्रांति के कारण कृषि विकास में क्षेत्रीय असंतुलन पैदा हुआ।</p> <p>कारण (R): उच्च उपज वाली कृषि तकनीक और सिंचाई सुविधाएँ शुरू में केवल चुनिंदा राज्यों में ही उपलब्ध थीं।</p>
	<p>Both A and R are true and R is the correct explanation of A.</p> <p>A और R दोनों सत्य हैं और R, A का सही स्पष्टीकरण है।</p>
	<p>Both A and R are true but R is not the correct explanation of A.</p> <p>A और R दोनों सत्य हैं लेकिन R, A का सही स्पष्टीकरण नहीं है।</p>
	<p>A is true but R is false.</p> <p>A सत्य है लेकिन R असत्य है।</p>
	<p>A is false but R is true.</p> <p>A असत्य है लेकिन R सत्य है।</p>

Q.No: 98	<p>Read the following Assertion (A) and Reason (R) carefully and choose the correct option.</p> <p>Assertion (A): The Minimum Needs Programme (MNP) was introduced in the Fifth Plan.</p> <p>Reason (R): It targeted improvement in quality of life through education, health, and drinking water.</p> <p>निम्नलिखित अभिकथन (A) और कारण (R) को ध्यानपूर्वक पढ़ें और सही विकल्प चुनें।</p> <p>अभिकथन (A): न्यूनतम आवश्यकता कार्यक्रम (MNP) पाँचवीं पंचवर्षीय योजना में शुरू किया गया था।</p> <p>कारण (R): इसका लक्ष्य शिक्षा, स्वास्थ्य और पेयजल के माध्यम से जीवन की गुणवत्ता में सुधार करना था।</p>
	<p>Both A and R are true and R is the correct explanation of A.</p> <p>A और R दोनों सत्य हैं और R, A का सही स्पष्टीकरण है।</p>
	<p>Both A and R are true but R is not the correct explanation of A.</p> <p>A और R दोनों सत्य हैं लेकिन R, A का सही स्पष्टीकरण नहीं है।</p>
	<p>A is true but R is false.</p> <p>A सत्य है लेकिन R असत्य है।</p>
	<p>A is false but R is true.</p> <p>A असत्य है लेकिन R सत्य है।</p>

Q.No: 99	<p>Consider the following statements about the Aravalli Green Wall Project:</p> <ol style="list-style-type: none"> 1. It is intended to check desertification across Western India. 2. The project is being implemented in four Indian states. 3. It aims to construct eco-sensitive highways along forest corridors. <p>अरावली ग्रीन वॉल परियोजना के बारे में निम्नलिखित कथनों पर विचार कीजिए:</p> <ol style="list-style-type: none"> 1. इसका उद्देश्य पश्चिमी भारत में मरुस्थलीकरण को रोकना है। 2. यह परियोजना चार भारतीय राज्यों में क्रियान्वित की जा रही है। 3. इसका उद्देश्य वन गलियारों के साथ-साथ पर्यावरण-संवेदनशील राजमार्गों का निर्माण करना है।
	<p>Only 1 and 2 are correct</p> <p>केवल 1 और 2 सही हैं</p>
	<p>Only 2 and 3 are correct</p> <p>केवल 2 और 3 सही हैं</p>
	<p>Only 1 and 3 are correct</p> <p>केवल 1 और 3 सही हैं</p>

All 1, 2 and 3 are correct
सभी 1, 2 और 3 सही हैं

<https://sscstudy.com/>

Not Answered

[Click Here to Challenge Question No.: 100](#)

Q.No: 100	Which of the following was not a goal of 1991 economic reforms? निम्नलिखित में से कौन सा 1991 के आर्थिक सुधारों का लक्ष्य नहीं था?
	Promote industrial competitiveness औद्योगिक प्रतिस्पर्धा को बढ़ावा देना
	Expand public sector control सार्वजनिक क्षेत्र के नियंत्रण का विस्तार करें
	Boost foreign investment विदेशी निवेश को बढ़ावा देना
	Achieve fiscal discipline राजकोषीय अनुशासन प्राप्त करें

<https://sscstudy.com/>



CANDIDATE RESPONSE SHEET/GRIEVANCE SYSTEM

[View Your Responses](#)[Click Here to View Grievance Questions](#)Admin logged in. [[Logout](#)]

Roll No.

Exam Level

:

Test Date

: 10 Dec 2025

Test Time and Shift

: 10:00 AM (Shift-1)

Correct Option selected Wrong Option selected Correct Option Not Answered[Save / Print](#)**Undertaking by the candidate :**

I acknowledge that this saved question paper is for my personal use and self-analysis only. I understand that sharing, distributing, or using it for commercial or any other purposes is strictly prohibited and may lead to legal action as per applicable acts, rules and regulations.

Note:

The candidates may note that in the challenge module the sequence of the questions and the options may be different from how it appeared during the examination. This is because in the challenge module the sequence of the questions as well as the answers will be the same for all the candidates who appeared in a particular shift while during the actual examination these sequences were different for different candidates. However the answer key selected by the candidates during the examination will exactly be reflected in the challenge module.

[Click Here for PART-A](#)[Click Here for PART-B](#)[Click Here for PART-C](#)[Click Here for PART-D](#)**PART-C (Quantitative Aptitude)**[Click Here to Challenge Question No.: 101](#)

Q.No: 101	A sum of Rs. 22,500 is invested at 4% per annum compound interest. What will be the amount after 2 years? 22,500 रुपये की राशि 4% वार्षिक चक्रवृद्धि ब्याज पर निवेश की जाती है। 2 वर्ष बाद राशि क्या होगी?
	24,500
	24,500
	24,336
	24,336
	26,000
	26,000
	25,000
	25,000

[Click Here to Challenge Question No.: 102](#)

Q.No: 102	A sum of money at simple interest doubles in 6 years. It will become three times in: साधारण ब्याज पर एक धनराशि 6 वर्षों में दोगुनी हो जाती है। यह कितने वर्षों में तीन गुनी हो जाएगी?
-----------	--

	14 years 14 वर्ष
	15 years 15 वर्ष
	13 years 13 वर्ष
	12 years 12 वर्ष
Not Answered	

[Click Here to Challenge Question No.: 103](#)

Q.No: 103	The surface area of a cuboid is 236 cm^2 and its dimensions are 6 cm, 7 cm, and h cm. Find h. एक घनाभ का पृष्ठीय क्षेत्रफल 236 वर्ग सेंटीमीटर है और इसके आयाम 6 सेंटीमीटर, 7 सेंटीमीटर और h सेंटीमीटर हैं। h का मान ज्ञात कीजिए।
	5.85 cm 5.85 सेंटीमीटर
	6.80 cm 6.80 सेंटीमीटर
	7.50 cm 7.50 सेंटीमीटर
	8 cm 8 सेंटीमीटर
Not Answered	

[Click Here to Challenge Question No.: 104](#)

Q.No: 104	A solid sphere of radius 4 cm is carved into 27 smaller identical spheres. What is the radius of each smaller sphere? 4 सेमी त्रिज्या वाले एक ठोस गोले को 27 छोटे समान गोलों में काटा गया है। प्रत्येक छोटे गोले की त्रिज्या क्या है?
	$\frac{4}{3}$ cm $\frac{4}{3}$ सेमी
	$\frac{2}{3}$ cm $\frac{2}{3}$ सेमी
	$\frac{1}{3}$ cm $\frac{1}{3}$ सेमी
	1 cm 1 सेमी
Not Answered	

[Click Here to Challenge Question No.: 105](#)

Q.No: 105	If the total surface area of a solid hemisphere is 262cm^2 , find its radius. यदि किसी ठोस गोलार्ध का कुल पृष्ठीय क्षेत्रफल 262cm^2 है तो उसकी त्रिज्या ज्ञात कीजिए
-----------	--

5.27 cm	5.27 सेमी
6.28 cm	6.28 सेमी
4.75 cm	4.75 सेमी
3.96 cm	3.96 सेमी

Not Answered

[Click Here to Challenge Question No.: 106](#)

Q.No: 106	What is the minimum number of cuts required to divide a cuboid into 12 equal cuboids? एक घनाभ को 12 बराबर घनाभों में विभाजित करने के लिए न्यूनतम कितने कट लगाने होंगे?
	3
	3
	4
	4
	5
	5
	6
	6

[Click Here to Challenge Question No.: 107](#)

Q.No: 107	A rectangular water tank measures 100 cm length, 50 cm width, and 30 cm height. If the tank is filled to 50% of its capacity, how much water (in liters) is in the tank? एक आयताकार पानी की टंकी की लंबाई 100 सेमी, चौड़ाई 50 सेमी और ऊँचाई 30 सेमी है। यदि टंकी अपनी क्षमता के 50% तक भरी हुई है, तो टंकी में कितना पानी (लीटर में) है?
	50 liters
	50 लीटर
	75 liters
	75 लीटर
	100 liters
	100 लीटर
	150 liters
	150 लीटर

[Click Here to Challenge Question No.: 108](#)

Q.No: 108	What is the smallest number that, when multiplied by 1.5, gives a whole number? वह सबसे छोटी संख्या क्या है जिसे 1.5 से गुणा करने पर पूर्ण संख्या प्राप्त होती है?
	1
	1
	2
	2
	3
	3

[Click Here to Challenge Question No.: 109](#)

Q.No: 109 The slant height of a cone is augmented by 20%, while the base radius remains the same. What is the percentage increase in the curved surface area of the cone?

एक शंकु की तिर्यक ऊँचाई 20% बढ़ा दी जाती है, जबकि आधार त्रिज्या वही रहती है। शंकु के वक्र पृष्ठीय क्षेत्रफल में कितने प्रतिशत की वृद्धि हुई है?

20%

20%

24%

24%

44%

44%

36%

36%

[Click Here to Challenge Question No.: 110](#)

Q.No: 110 What will be the value of K for which the system of equations $2x + 2y - 5 = 0$ and $6x + ky + 7 = 0$ has no solution?

K का वह मान क्या होगा जिसके लिए समीकरणों $2x + 2y - 5 = 0$ और $6x + ky + 7 = 0$ की प्रणाली का कोई हल नहीं है?

2

2

3

3

4

4

6

6

[Click Here to Challenge Question No.: 111](#)

Q.No: 111 If $x : y = 3 : 4$, then $(7x + 2y) : (7x - 2y)$ is equal to?

अगर $x : y = 3 : 4$, तो $(7x + 2y) : (7x - 2y)$ किसके बराबर है?

20:11

20:11

21:12

21:12

25:13

25:13

29:13

29:13

[Click Here to Challenge Question No.: 112](#)

Q.No: 112 A right circular cone is inscribed in a cube such that its base coincides with the base of the cube and vertex lies on the top face center. What fraction of the cube's volume does the cone occupy?

	एक लंबवृत्तीय शंकु एक घन में इस प्रकार अंकित है कि उसका आधार घन के आधार के साथ संपाती है और शीर्ष शीर्ष फलक के कोण पर है। शंकु का आयतन का कितना भाग घेरता है?
	$\pi/6$ $\pi/6$
	$\pi/8$ $\pi/8$
	$\pi/12$ $\pi/12$
	$\pi/2$ $\pi/2$
Not Answered	

[Click Here to Challenge Question No.: 113](#)

Q.No: 113	If $\frac{3}{4}$ of a number is 0.6 more than $\frac{1}{2}$ of it, find the number. अगर किसी संख्या का $\frac{3}{4}$ उसके $\frac{1}{2}$ से 0.6 ज्यादा है, तो वह संख्या ज्ञात कीजिए।
	2.4 2.4
	2 2
	3 3
	1.8 1.8

[Click Here to Challenge Question No.: 114](#)

Q.No: 114	A regular right pyramid has a square base of side 8 cm and a height of 3 cm. Find its total surface area. एक सम समलंब पिरामिड का वर्गाकार आधार, भुजा 8 सेमी और ऊँचाई 3 सेमी है। इसका कुल पृष्ठीय क्षेत्रफल ज्ञात कीजिए।
	128 cm ² 128 सेमी ²
	144 cm ² 144 cm ²
	160 cm ² 160 सेमी ²
	176 cm ² 176 सेमी ²

[Click Here to Challenge Question No.: 115](#)

Q.No: 115	If the height of a regular right pyramid with a square base is increased by 20% and the side length of its base is decreased by 10%, what is the percentage change in its volume? यदि वर्गाकार आधार वाले एक नियमित समकोण पिरामिड की ऊँचाई 20% बढ़ा दी जाए तथा इसके आधार की भुजा की लंबाई 10% कम कर दी जाए, तो इसके आयतन में प्रतिशत परिवर्तन क्या होगा?
	2.8% decrease 2.8% की कमी

1.2% increase

1.2% वृद्धि

2.8% increase

2.8% की वृद्धि

No change

कोई परिवर्तन नहीं होता है

Not Answered

[Click Here to Challenge Question No.: 116](#)

Q.No: 116

A car runs 18.4 km using $2\frac{1}{2}$ liters of petrol. What is the mileage in km per liter (rounded to 2 decimals)?

एक कार 2 $\frac{1}{2}$ लीटर पेट्रोल का उपयोग करके 18.4 किमी चलती है। किमी प्रति लीटर में माइलेज क्या है (2 दशमलव तक पूर्णांकित)?

7.28

7.28

7.36

7.36

7.44

7.44

7.52

7.52

[Click Here to Challenge Question No.: 117](#)

Q.No: 117

The ratio of an interior angle to its corresponding exterior angle in a regular polygon is 5:1. How many sides does the polygon have?

एक समबहुभुज के आंतरिक कोण और उसके संगत बाह्य कोण का अनुपात 5:1 है। इस बहुभुज में कितनी भुजाएँ हैं?

12

12

14

14

15

15

16

16

Not Answered

[Click Here to Challenge Question No.: 118](#)

Q.No: 118

A student got $33\frac{1}{3}\%$ marks in an exam and failed by 20 marks. If he had got 50%, he would have passed by 10 marks. Find total marks.

एक छात्र को एक परीक्षा में $33\frac{1}{3}\%$ अंक मिले और वह 20 अंकों से अनुत्तीर्ण हो गया। अगर उसे 50% अंक मिले होते, तो वह 10 अंकों से उत्तीर्ण होता। कुल अंक ज्ञात कीजिए।

180

180

150

150

200

200

[Click Here to Challenge Question No.: 119](#)

Q.No: 119 A circle has a circumference of 44 cm. Find its radius.
एक वृत्त की परिधि 44 सेंटीमीटर है। इसकी त्रिज्या ज्ञात कीजिए।

6 cm
6 सेंटीमीटर

7 cm
7 सेंटीमीटर

5 cm
5 सेंटीमीटर

8 cm
8 सेंटीमीटर

[Click Here to Challenge Question No.: 120](#)

Q.No: 120 The perimeter of a semicircle with radius 14 cm is:
14 सेंटीमीटर त्रिज्या वाले अर्धवृत्त का परिमाप है:

58 cm
58 सेंटीमीटर

64 cm
64 सेंटीमीटर

54 cm
54 सेंटीमीटर

72 cm
72 सेंटीमीटर

[Click Here to Challenge Question No.: 121](#)

Q.No: 121 A student's marks in Mathematics were 20% more than in Physics. If he scored 72 in Physics, how many marks did he score in Mathematics?

एक छात्र के गणित में अंक भौतिकी से 20% अधिक थे। अगर उसने भौतिकी में 72 अंक प्राप्त किए, तो उसने गणित में कितने अंक प्राप्त किए?

82.4
82.4

88.4
88.4

84.4
84.4

86.4
86.4

[Click Here to Challenge Question No.: 122](#)

Q.No: 122 A square garden is surrounded by a path 1 m wide on all sides. The area of the path alone is 36 m². What is the length of the garden's side?

	एक वर्गाकार बगीचा चारों ओर से 1 मीटर चौड़े रास्ते से घिरा हुआ है। अकेले रास्ते का क्षेत्रफल 36 वर्ग मीटर है। बगीचे की भुजा की लंबाई क्या है?
	4 m 4 मीटर
	5 m 5 मीटर
	6 m 6 मीटर
	8 m 8 मीटर
Not Answered	

[Click Here to Challenge Question No.: 123](#)

Q.No: 123	The length and width of a rectangle are in a 5:3 ratio. Given that the perimeter is 96 cm, determine the area of the rectangle. एक आयत की लंबाई और चौड़ाई का अनुपात 5:3 है। दिया गया है कि आयत का परिमाप 96 सेमी है, आयत का क्षेत्रफल ज्ञात कीजिए।
	720 cm^2 720 सेमी ²
	540 cm^2 540 सेमी ²
	360 cm^2 360 सेमी ²
	594 cm^2 594 सेमी ²

[Click Here to Challenge Question No.: 124](#)

Q.No: 124	A trapezium has one parallel side double the other. The height is 10 cm, and the area is 900 cm^2 . Find the lengths of the parallel sides. एक समलम्ब चतुर्भुज की एक समांतर भुजा दूसरी की दोगुनी है। ऊँचाई 10 सेमी है और क्षेत्रफल 900 वर्ग सेमी है। समांतर भुजाओं की लंबाई ज्ञात कीजिए।
	30 cm and 60 cm 30 सेमी और 60 सेमी
	50 cm and 100 cm 50 सेमी और 100 सेमी
	45 cm and 90 cm 45 सेमी और 90 सेमी
	60 cm and 120 cm 60 सेमी और 120 सेमी

[Click Here to Challenge Question No.: 125](#)

Q.No: 125	A regular hexagon with side 6 cm is inscribed in a circle. What is the radius of the circle? 6 सेमी भुजा वाला एक सम षट्भुज एक वृत्त के अन्दर अंकित है। वृत्त की त्रिज्या क्या है?
	$5\sqrt{3}$ cm $5\sqrt{3}$ सेमी
	12 cm 12 सेमी

$6\sqrt{3}$ cm

 $6\sqrt{3}$ सेमी

6 cm

6 सेमी

[Click Here to Challenge Question No.: 126](#)

Q.No: 126 If $a^2 + b^2 = 100$ and $a - b = 4$, find the value of ab .

अगर $a^2 + b^2 = 100$ और $a - b = 4$ है, तो ab का मान ज्ञात कीजिए।

28

28

32

32

42

42

54

54

[Click Here to Challenge Question No.: 127](#)

Q.No: 127 The average of 6 positive numbers is 10. If one number is excluded, the average becomes 9. What is the excluded number?

6 धनात्मक संख्याओं का औसत 10 है। अगर एक संख्या निकाल दी जाए, तो औसत 9 हो जाता है। निकाली गई संख्या क्या है?

15

15

14

14

12

12

16

16

Not Answered

[Click Here to Challenge Question No.: 128](#)

Q.No: 128 If the lines given by $3x + 2ky = 2$, $3x + 5y = -1$ are parallel, then the value of k is:

अगर $3x + 2ky = 2$, $3x + 5y = -1$ द्वारा दी गई रेखाएँ समान्तर हैं, तो k का मान है:

 $\frac{2}{5}$
 $\frac{2}{5}$
 $\frac{2}{5}$
 $\frac{2}{5}$
 $\frac{5}{2}$
 $\frac{5}{2}$
 $\frac{5}{2}$
 $\frac{5}{2}$
 $\frac{5}{2}$
 $\frac{5}{2}$

$\frac{3}{2}$
 $\frac{3}{2}$

$\frac{1}{2}$
 $\frac{1}{2}$

[Click Here to Challenge Question No.: 129](#)

Q.No: 129 What is the slope of the line given by the equation $3x+2y=6$?

समीकरण $3x+2y=6$ द्वारा दी गई रेखा का ढलान क्या है?

$\frac{3}{2}$
 $\frac{3}{2}$

$-\frac{3}{2}$
 $-\frac{3}{2}$

$\frac{2}{3}$
 $\frac{2}{3}$

6
6

[Click Here to Challenge Question No.: 130](#)

Q.No: 130 Which line is not parallel to the line $6x-2y=10$?

कौन सी रेखा $6x-2y=10$ रेखा के समान्तर नहीं है?

$3x-y=4$
 $3x-y=4$

$y=3x-1$
 $y=3x-1$

$y=4x+5$
 $y=4x+5$

$12x-4y=9$
 $12x-4y=9$

Not Answered

Q.No: 131	<p>A tower and a pole stand vertically. From a point between them on the ground, the angles of elevation of their tops are 45° and 30°, respectively. If the pole is 20 m high, and the point is equidistant from both, find the height of the tower.</p> <p>एक मीनार और एक खंभा ऊर्ध्वाधरतः खड़े हैं। ज़मीन पर उनके बीच स्थित एक बिंदु से, उनके शीर्षों के उन्नयन कोण क्रमशः 45° और 30° हैं। अगर खंभा 20 मीटर ऊँचा है, और बिंदु दोनों से समान दूरी पर है, तो मीनार की ऊँचाई ज्ञात कीजिए।</p>
	20 m 20 मीटर
	40 m 40 मीटर
	34.64 m 34.64 मीटर
	90 m 90 मीटर

Q.No: 132	<p>A balloon is hovering 100 m above ground. The angle of elevation of the balloon from a point on the ground is 60°. Find its horizontal distance from the observer.</p> <p>एक गुब्बारा ज़मीन से 100 मीटर ऊपर मँडरा रहा है। ज़मीन पर एक बिंदु से गुब्बारे का उन्नयन कोण 60° है। प्रेक्षक से इसकी क्षैतिज दूरी ज्ञात कीजिए।</p>
	$100\sqrt{3}$ m $100\sqrt{3}$ मीटर
	100 m 100 मीटर
	173 m 173 मीटर
	57.7m 57.7 मीटर

Q.No: 133	<p>The volume of a cylinder is the same as its total surface area. Given that the radius is 3 cm, determine the height of the cylinder.</p> <p>एक बेलन का आयतन उसके कुल पृष्ठीय क्षेत्रफल के बराबर है। दिया गया है कि त्रिज्या 3 सेमी है, बेलन की ऊँचाई ज्ञात कीजिए।</p>
	2 cm 2 सेमी
	4 cm 4 सेमी
	6 cm 6 सेमी
	8 cm 8 सेमी

Q.No: 134	<p>A cylindrical candle (radius 3 cm, height 10 cm) burns evenly and reduces 1 cm in height every 2 hours. In how many hours will 70% of the candle's volume be burned?</p> <p>एक बेलनाकार मोमबत्ती (त्रिज्या 3 सेमी, ऊँचाई 10 सेमी) समान रूप से जलती है और हर 2 घंटे में इसकी ऊँचाई 1 सेमी कम हो जाती है। कितने घंटों में मोमबत्ती का 70% आयतन जल जाएगा?</p>
-----------	---

	10 hours 10 घंटे
	14 hours 14 घंटे
	18 hours 18 घंटे
	20 hours 20 घंटे

[Click Here to Challenge Question No.: 135](#)

Q.No: 135	The area of the base of a prism is 36 cm^2 , and the lateral surface area is 288 cm^2 . If the height is 8 cm, what is the perimeter of the base? एक प्रिज्म के आधार का क्षेत्रफल 36 वर्ग सेमी है और पार्श्व पृष्ठीय क्षेत्रफल 288 वर्ग सेमी है। यदि ऊँचाई 8 सेमी है, तो आधार का परिमाप क्या है?
	24 cm 24 सेमी
	36 cm 36 सेमी
	48 cm 48 सेमी
	18 cm 18 सेमी

Not Answered

[Click Here to Challenge Question No.: 136](#)

Q.No: 136	Estimate the volume of a right prism whose base is a regular hexagon with sides of 10 cm each and a vertical height of 8 cm. एक समकोण प्रिज्म का आयतन ज्ञात कीजिए जिसका आधार एक सम षट्भुज है जिसकी प्रत्येक भुजा 10 सेमी है तथा ऊर्ध्वाधर ऊँचाई 8 सेमी है।
	2078 cm^3 2078 सेमी ³
	2070 cm^3 2070 सेमी ³
	2110 cm^3 2110 सेमी ³
	1980 cm^3 1980 सेमी ³

Not Answered

[Click Here to Challenge Question No.: 137](#)

Q.No: 137	If $\tan x = \cot(2x - 15^\circ)$ find x अगर $\tan x = \cot(2x - 15^\circ)$ तो x ज्ञात कीजिए
	30° 30°
	35° 35°
	22.5°

[Click Here to Challenge Question No.: 138](#)

Q.No: 138 The centroid of a triangle with vertices (0,0), (6,0), and (0,8) is:

शीर्ष (0,0), (6,0) और (0,8) वाले त्रिभुज का केन्द्रक है:

(3, 4)

(3, 4)

(2, 2.67)

(2, 2.67)

(1.5, 2)

(1.5, 2)

(6, 8)

(6, 8)

Not Answered

[Click Here to Challenge Question No.: 139](#)Q.No: 139 A brass hemispherical bowl has an inner diameter of 10.5 cm. If the cost of tin-plating the inner surface is ₹15 per 100 cm², what will be the total cost (in whole number) of plating the inside of the bowl?

एक पीतल के अर्धगोलाकार कटोरे का आंतरिक व्यास 10.5 सेंटीमीटर है। यदि आंतरिक सतह पर टिन-प्लेटिंग की लागत ₹15 प्रति 100 वर्ग सेंटीमीटर है, तो कटोरे के अंदर की सतह पर प्लेटिंग की कुल लागत (पूर्णांक में) कितनी होगी?

₹26

₹26

₹34

₹34

₹28

₹28

₹44

₹44

Not Answered

[Click Here to Challenge Question No.: 140](#)Q.No: 140 If $\sin \theta = \frac{7}{25}$ and θ lies in the second quadrant, find the value of $\tan \theta$.यदि $\sin \theta = \frac{7}{25}$ और θ दूसरे चतुर्थांश में स्थित है, तो $\tan \theta$ का मान ज्ञात कीजिए। $-\frac{7}{24}$ $-\frac{7}{24}$ $-\frac{8}{25}$ $-\frac{8}{25}$ $-\frac{5}{24}$ $-\frac{5}{24}$

$-\frac{7}{25}$
 $-\frac{7}{25}$

Not Answered

[Click Here to Challenge Question No.: 141](#)

Q.No: 141 If $\cos \theta = \frac{m^2-n^2}{m^2+n^2}$, then what is $\tan \theta$?
 यदि $\cos \theta = \frac{m^2-n^2}{m^2+n^2}$, तो $\tan \theta$ क्या है?

$\frac{2mn}{m^2-n^2}$

$\frac{2mn}{m^2-n^2}$

$\frac{m^2-n^2}{2mn}$

$\frac{m^2-n^2}{2mn}$

$\frac{m^2+n^2}{2mn}$

$\frac{m^2+n^2}{2mn}$

$\frac{2mn}{m^2+n^2}$

$\frac{2mn}{m^2+n^2}$

[Click Here to Challenge Question No.: 142](#)

Q.No: 142 If $\sin x = \cos(2x + 15^\circ)$, what is the value of x ?
 यदि $\sin x = \cos(2x + 15^\circ)$ है, तो x का मान क्या है?

20°

20°

30°

30°

25°

25°

15°

15°

[Click Here to Challenge Question No.: 143](#)

Q.No: 143 For a triangle with vertices $A(0, 0)$, $B(5, 0)$, and $C(0, 10)$, where is its Orthocenter located?
 शीर्ष $A(0, 0)$, $B(5, 0)$ और $C(0, 10)$ वाले त्रिभुज के लिए, इसका लंबकेन्द्र कहाँ स्थित है?

$(0, 0)$

$(0, 0)$

$(0, 5)$

$(0, 5)$

$(5, 0)$

$(5, 0)$

$(5, 10)$

Not Answered

[Click Here to Challenge Question No.: 144](#)

Q.No: 144	In $\triangle ABC$, the angle bisector AD of $\angle A$ divides side BC. If $AB=10$ cm, $AC=12$ cm, and $BC=11$ cm, what is the length of the segment BD? $\triangle ABC$ में, $\angle A$ का कोण समद्विभाजक AD, भुजा BC को विभाजित करता है। यदि $AB=10$ सेमी, $AC=12$ सेमी, और $BC=11$ सेमी है, तो रेखाखंड BD की लंबाई क्या है?
	5 cm 5 सेमी
	8 cm 8 सेमी
	11 cm 11 सेमी
	6 cm 6 सेमी

Not Answered

[Click Here to Challenge Question No.: 145](#)

Q.No: 145	Simplify: $\sqrt{50} + \sqrt{18} - \sqrt{8}$ सरल करें: $\sqrt{50} + \sqrt{18} - \sqrt{8}$
	$7\sqrt{7}$ $7\sqrt{7}$
	$6\sqrt{2}$ $6\sqrt{2}$
	$5\sqrt{2}$ $5\sqrt{2}$
	$4\sqrt{2}$ $4\sqrt{2}$

[Click Here to Challenge Question No.: 146](#)

Q.No: 146	In a circle, the angle subtended by chord AB at a point on the circumference is 35° . What is the angle subtended by the same chord at the center of the circle? एक वृत्त में, जीवा AB द्वारा परिधि पर स्थित एक बिंदु पर बनाया गया कोण है 35° . उसी जीवा द्वारा वृत्त के केंद्र पर बनाया गया कोण कितना है?
	35° 35°
	70° 70°
	90° 90°
	105° 105°

[Click Here to Challenge Question No.: 147](#)

Q.No: 147 A point P lies outside a circle with center O and radius $r = 6$ cm. Two tangents PA and PB are drawn from P to the circle, and the angle between the tangents $\angle APB = 60^\circ$. What is the distance from point P to the center O?

एक बिंदु P, केंद्र O और त्रिज्या $r = 6$ सेमी वाले एक वृत्त के बाहर स्थित है। P से वृत्त पर दो स्पर्श रेखाएँ PA और PB खींची गई हैं, और स्पर्श रेखाओं $\angle APB$ के बीच का कोण 60° है। बिंदु P से केंद्र O की दूरी क्या है?

6 cm

6 सेमी

☒ $6\sqrt{3}$ cm $6\sqrt{3}$ cm☐ $6\sqrt{2}$ cm $6\sqrt{2}$ सेमी☐ 12 cm

12 सेमी

[Click Here to Challenge Question No.: 148](#)

Q.No: 148 $1.75 \div 0.25 = ?$

 $1.75 \div 0.25 = ?$ ☒ 7

7

☐ 8

8

☐ 4

4

☐ 5

5

[Click Here to Challenge Question No.: 149](#)

Q.No: 149 A lends \$5000 at 5% for 4 years. B lends \$4000 at 6% for 3 years. Who earns more SI?

A, 4 वर्षों के लिए 5% की दर से \$5000 उधार देता है। B, 3 वर्षों के लिए 6% की दर से \$4000 उधार देता है। कौन अधिक साधारण ब्याज अर्जित करता है?

☒ A earns more

A अधिक कमाता है

☐ B earns more

B अधिक कमाता है

☐ Both same

दोनों एक जैसे

☐ Can't say

कह नहीं सकते

[Click Here to Challenge Question No.: 150](#)

Q.No: 150 A can complete a task in 12 days and B in 18 days. If they work together, how long will they take to complete the task?

	A एक काम को 12 दिनों में और B 18 दिनों में पूरा कर सकता है। अगर वे साथ मिलकर काम करें, तो उन्हें काम पूरा करने में कितना समय लगेगा?	https://sscstudy.com/
	6 days 6 दिन	
	7.2 days 7.2 दिन	
	7.5 days 7.5 दिन	
	8 days 8 दिन	



CANDIDATE RESPONSE SHEET/GRIEVANCE SYSTEM

[View Your Responses](#)[Click Here to View Grievance Questions](#)Admin logged in. [[Logout](#)]

Roll No.

Exam Level

:

Test Date

: 10 Dec 2025

Test Time and Shift

: 10:00 AM (Shift-1)

Correct Option selected Wrong Option selected Correct Option Not Answered[Save / Print](#)**Undertaking by the candidate :**

I acknowledge that this saved question paper is for my personal use and self-analysis only. I understand that sharing, distributing, or using it for commercial or any other purposes is strictly prohibited and may lead to legal action as per applicable acts, rules and regulations.

Note:

The candidates may note that in the challenge module the sequence of the questions and the options may be different from how it appeared during the examination. This is because in the challenge module the sequence of the questions as well as the answers will be the same for all the candidates who appeared in a particular shift while during the actual examination these sequences were different for different candidates. However the answer key selected by the candidates during the examination will exactly be reflected in the challenge module.

[Click Here for PART-A](#)[Click Here for PART-B](#)[Click Here for PART-C](#)[Click Here for PART-D](#)**PART-D (English Comprehension)**[Click Here to Challenge Question No.: 151](#)

Q.No: 151

In the following question, a sentence with a blank is given, followed by five words labeled (1), (2), (3), (4), and (5). Choose the word that fills the blank appropriately in the context of the passage.

Low hemoglobin levels among women remain a pervasive global health concern, often (1) _____ from nutritional deficiencies, chronic diseases, or socio-economic disparities. In many developing nations, iron-deficiency anemia (2) _____ an alarming proportion of the female population, with consequences that extend beyond fatigue to impair cognitive performance and maternal outcomes. Medical experts emphasize that anemia is often (3) **insidious**, progressing stealthily until severe symptoms manifest. Despite the availability of supplements and fortified foods, adherence to preventive strategies (4) _____ hampered by cultural taboos, misinformation, and healthcare. Furthermore, in many societies, menstruation and related issues are still shrouded in (5) **obfuscation**, limiting open dialogue and delaying early intervention. Addressing this silent epidemic requires not only medical solutions but also robust public health campaigns aimed at education and destigmatization. Bridging the gap between awareness and action is crucial to empowering women and fostering healthier generations.

Which participle/verb form best fits? (1)

☒ resulting☐ result☒ results☐ resulted

[Click Here to Challenge Question No.: 152](#)

Q.No: 152	<p>In the following question, a sentence with a blank is given, followed by five words labeled (1), (2), (3), (4), and (5). Choose the word that fills the blank appropriately in the context of the passage.</p> <p>Low hemoglobin levels among women remain a pervasive global health concern, often (1) _____ from nutritional deficiencies, chronic diseases, or socio-economic disparities. In many developing nations, iron-deficiency anemia (2) _____ an alarming proportion of the female population, with consequences that extend beyond fatigue to impair cognitive performance and maternal outcomes. Medical experts emphasize that anemia is often (3) insidious, progressing stealthily until severe symptoms manifest. Despite the availability of supplements and fortified foods, adherence to preventive strategies (4) _____ hampered by cultural taboos, misinformation, and healthcare. Furthermore, in many societies, menstruation and related issues are still shrouded in (5) obfuscation, limiting open dialogue and delaying early intervention. Addressing this silent epidemic requires not only medical solutions but also robust public health campaigns aimed at education and destigmatization. Bridging the gap between awareness and action is crucial to empowering women and fostering healthier generations.</p> <p>Choose the right verb form.(2)</p>
	affects
	affect
	affecting
	affected

[Click Here to Challenge Question No.: 153](#)

Q.No: 153	<p>In the following question, a sentence with a blank is given, followed by five words labeled (1), (2), (3), (4), and (5). Choose the word that fills the blank appropriately in the context of the passage.</p> <p>Low hemoglobin levels among women remain a pervasive global health concern, often (1) _____ from nutritional deficiencies, chronic diseases, or socio-economic disparities. In many developing nations, iron-deficiency anemia (2) _____ an alarming proportion of the female population, with consequences that extend beyond fatigue to impair cognitive performance and maternal outcomes. Medical experts emphasize that anemia is often (3) insidious, progressing stealthily until severe symptoms manifest. Despite the availability of supplements and fortified foods, adherence to preventive strategies (4) _____ hampered by cultural taboos, misinformation, and healthcare. Furthermore, in many societies, menstruation and related issues are still shrouded in (5) obfuscation, limiting open dialogue and delaying early intervention. Addressing this silent epidemic requires not only medical solutions but also robust public health campaigns aimed at education and destigmatization. Bridging the gap between awareness and action is crucial to empowering women and fostering healthier generations.</p> <p>What does 'insidious' most nearly mean here? (3)</p>
	Sudden
	Deceptive
	Violent
	Predictable

[Click Here to Challenge Question No.: 154](#)

Q.No: 154	<p>In the following question, a sentence with a blank is given, followed by five words labeled (1), (2), (3), (4), and (5). Choose the word that fills the blank appropriately in the context of the passage.</p> <p>Low hemoglobin levels among women remain a pervasive global health concern, often (1) _____ from nutritional deficiencies, chronic diseases, or socio-economic disparities. In many developing nations, iron-deficiency anemia (2) _____ an alarming proportion of the female population, with consequences that extend beyond fatigue to impair cognitive performance and maternal outcomes. Medical experts emphasize that anemia is often (3) insidious, progressing stealthily until severe symptoms manifest. Despite the availability of supplements and fortified foods, adherence to preventive strategies (4) _____ hampered by cultural taboos, misinformation, and healthcare. Furthermore, in many societies, menstruation and related issues are still shrouded in (5) obfuscation, limiting open dialogue and delaying early intervention. Addressing this silent epidemic requires not only medical solutions but also robust public health campaigns aimed at education and destigmatization. Bridging the gap between awareness and action is crucial to empowering women and fostering healthier generations.</p> <p>Which auxiliary/modal verb fits best?(4)</p>
	must
	has
	is
	was

[Click Here to Challenge Question No.: 155](#)

Q.No: 155	<p>In the following question, a sentence with a blank is given, followed by five words labeled (1), (2), (3), (4), and (5). Choose the word that fills the blank appropriately in the context of the passage.</p> <p>Low hemoglobin levels among women remain a pervasive global health concern, often (1) _____ from nutritional deficiencies, chronic diseases, or socio-economic disparities. In many developing nations, iron-deficiency anemia (2) _____ an alarming proportion of the female population, with consequences that extend beyond fatigue to impair cognitive performance and maternal outcomes. Medical experts emphasize that anemia is often (3) insidious, progressing stealthily until severe symptoms manifest. Despite the availability of supplements and fortified foods, adherence to preventive strategies (4) _____ hampered by cultural taboos, misinformation, and healthcare. Furthermore, in many societies, menstruation and related issues are still shrouded in (5) obfuscation, limiting open dialogue and delaying early intervention. Addressing this silent epidemic requires not only medical solutions but also robust public health campaigns aimed at education and destigmatization. Bridging the gap between awareness and action is crucial to empowering women and fostering healthier generations.</p> <p>'Obfuscation' most nearly means: (5)</p>
	Clarity
	Confusion
	Enthusiasm
	Revelation

Not Answered

[Click Here to Challenge Question No.: 156](#)

Q.No: 156	<p>Which of the following options, rearrange the given sentences in a proper sequence to make a meaningful passage?</p> <ol style="list-style-type: none">1. English became the a global lingua franca, constantly evolving by absorbing words from languages worldwide and adapting to technological and scientific advancements.2. It was quite different from modern English, with a complex grammar system and a vocabulary influenced by Norse due to Viking invasions.3. Old English was heavily influenced by Germanic languages brought by the Angles, Saxons, and Jutes in the 5th century.4. The Renaissance and the invention of the printing press helped standardize English spelling and grammar, leading to the rise of Early Modern English.5. With the Norman Conquest of 1066, a large number of French and Latin words were incorporated in English, particularly in government, law and art.
	3-2-5-4-1
	2-4-3-5-1
	2-5-4-3-1
	1-4-3-2-5

[Click Here to Challenge Question No.: 157](#)

Q.No: 157	<p>Improve the following sentence by replacing the underlined words with the correct phrasal verb.</p> <p>After months of training, she was ready <u>to go through</u> the final exam.</p>
	go in for
	go off
	went through
	go along

[Click Here to Challenge Question No.: 158](#)

Q.No: 158	<p>Choose the correct idiom for the word highlighted in bold.</p> <p>Rohit is very calculative and always has an axe to grind.</p>
	To have a hidden personal motive
	To sharpen one's skills
	To work hard for success
	To take revenge

[Click Here to Challenge Question No.: 159](#)

Q.No: 159	Identify the error in the sentence. We must respect the elder people in our community.	https://sscstudy.com/
	respect	
	people	
	elder	
	community	

[Click Here to Challenge Question No.: 160](#)

Q.No: 160	Which of the given options arranges the following sentences in the most logical sequence to form a meaningful paragraph? 1. Without keystone species, entire ecosystems can collapse, leading to significant biodiversity loss. 2. The concept of a keystone species was first introduced by ecologist Robert Paine, who studied the effect of removing certain predators from an ecosystem. 3. Keystone species play a disproportionately large role in maintaining the structure and stability of their ecosystems. 4. For example, sea otters help regulate sea urchin populations, preventing the destruction of kelp forests. 5. This idea revolutionized ecology by highlighting how some species have a far greater impact on their environment than others.
	1-3-2-4-5
	3-2-5-4-1
	4-3-2-5-1
	5-2-3-1-4

[Click Here to Challenge Question No.: 161](#)

Q.No: 161	Fill in the blank with the correctly spelt word. His _____ behavior during negotiations frustrated his teammates.
	intranzigent
	intransegent
	intransigant
	intransigent

[Click Here to Challenge Question No.: 162](#)

Q.No: 162	Select the most appropriate synonym of the given word: APPOSITE
	Irrelevant
	Vague

Relevant

<https://sscstudy.com/>

Random

[Click Here to Challenge Question No.: 163](#)

Q.No: 163 Select the most appropriate synonym of the given word: **IGNOMINY**

☒ Disgrace

☐ Respect

☐ Fame

☐ Honor

[Click Here to Challenge Question No.: 164](#)

Q.No: 164 Select the most appropriate antonym of the given word. **Exonerate**

☒ Convict

☐ Free

☐ Excuse

☐ Liberate

[Click Here to Challenge Question No.: 165](#)

Q.No: 165 Select the most appropriate antonym of the given word. **Scrupulous**

☐ Honest

☒ Immoral

☐ Conscientious

☐ Ethical

[Click Here to Challenge Question No.: 166](#)

Q.No: 166 Select the most appropriate synonym of the given word: **NEOPHYTE**

☒ Beginner

☐ Veteran

☐ Master

☐ Expert

<https://sscstudy.com/>

Q.No: 167	Select the most appropriate synonym of the given word: PROPITIATE
	Agitate
	Provoke
<input checked="" type="checkbox"/>	Appease
	Enrage

Q.No: 168	Select the most appropriate antonym of the given word. Intransigence
	Obstinacy
<input checked="" type="checkbox"/>	Compromise
	Defiance
	Rigidity

Q.No: 169	Select the most appropriate antonym of the given word. Imbroglia
	Entanglement
	Complication
<input checked="" type="checkbox"/>	Agreement
	Dispute

Q.No: 170	Choose the correct meaning of idiom: Will not pass muster
<input checked="" type="checkbox"/>	Will not meet required standards
	Will not bring any excitement
	Will not escape attention
	Will not create any disturbance

Q.No: 171	Choose the correct meaning of idiom: Finger in the pie
	Being involved or interfering in something
	Trying to cause conflict intentionally
	Avoiding responsibility
	Speaking without knowledge

[Click Here to Challenge Question No.: 172](#)

Q.No: 172	Choose the correct spelling for a word meaning 'generosity in giving'.
	Largesse
	Larges
	Largece
	Largese

[Click Here to Challenge Question No.: 173](#)

Q.No: 173	Select the correct spelling for a word meaning 'clumsy or awkward in movement or manner'.
	Gauche
	Gosh
	Goush
	Gauch

[Click Here to Challenge Question No.: 174](#)

Q.No: 174	Find the correct spelling of a word describing disloyal betrayal.
	Perfidy
	Perphidy
	Perfedee
	Perfody

[Click Here to Challenge Question No.: 175](#)

Q.No: 175	Choose the correct one-word substitute for: 'A person who studies the stars and planets to predict the future'.
	Astronomer

	Astrologer	https://sscstudy.com/
	Meteorologist	
	Cosmologist	

[Click Here to Challenge Question No.: 176](#)

Q.No: 176	Choose the correct one-word substitute for: 'An expression of sympathy, especially on the occasion of death'.
	Condolence
	Consolation
	Reassurance
	Assurance

[Click Here to Challenge Question No.: 177](#)

Q.No: 177	Spot the correct spelling of a vine-pest genus.
	Phylloxera
	Phylloxerae
	Philoxera
	Phyloxera

[Click Here to Challenge Question No.: 178](#)

Q.No: 178	Choose the correct one-word substitute for: 'The practice of helping the poor and needy, especially by donating money '
	Philanthropy
	Misogyny
	Sympathy
	Misanthrope

[Click Here to Challenge Question No.: 179](#)

Q.No: 179	<p>In the given passage, some words have been deleted. Read the passage intently and choose the most appropriate option to fill in each blank:</p> <p>In recent years, bio-surveillance has migrated from the periphery of crisis management into the marrow of everyday governance. What began as a provisional response to epidemiological disruption has, with startling velocity, matured into a (1) _____ instrument of statecraft. The body, once a site of private experience, is now parsed into micro-indicators, archived not as narratives but as anomalies within statistical matrices. The threshold for intervention has shifted — not at diagnosis, but at deviation. Such a regime thrives on a curious inversion: surveillance no longer reacts to illness; it anticipates it. The calculus of care becomes indistinguishable from the logic of control, and protection is no longer offered but enforced. In this architecture, the citizen is both beneficiary and suspect, suspended in a biopolitical gaze that renders health a function of (2) _____, not autonomy. What is striking, however, is not merely the pervasiveness of this apparatus, but its opacity. Embedded technologies track pulse, breath, temperature — but who interprets? Who decides what qualifies as pathological? The grammar of governance here is not public but procedural, not deliberative but (3) _____. If unchecked, this mode risks normalizing a world in which vigilance masquerades as virtue. The ethical stakes are not peripheral but foundational: in rendering health as measurable, we risk rendering it (4) _____. The ineffable — pain, anxiety, even trust — becomes illegible within a model that privileges only what can be graphed. The challenge, then, is not to reject technology but to reinscribe its terms. Bio-surveillance must be subject to democratic scrutiny, not immune to it. Otherwise, we inherit not safety but a simulated solidarity, and in its name, a deeply (5) _____ submission.</p> <p>What should come in the place of blank number (1)?</p>
	interpretive
	diagnostic
	ornamental
	cautionary

[Click Here to Challenge Question No.: 180](#)

Q.No: 180	<p>In the given passage, some words have been deleted. Read the passage intently and choose the most appropriate option to fill in each blank:</p> <p>In recent years, bio-surveillance has migrated from the periphery of crisis management into the marrow of everyday governance. What began as a provisional response to epidemiological disruption has, with startling velocity, matured into a (1) _____ instrument of statecraft. The body, once a site of private experience, is now parsed into micro-indicators, archived not as narratives but as anomalies within statistical matrices. The threshold for intervention has shifted — not at diagnosis, but at deviation. Such a regime thrives on a curious inversion: surveillance no longer reacts to illness; it anticipates it. The calculus of care becomes indistinguishable from the logic of control, and protection is no longer offered but enforced. In this architecture, the citizen is both beneficiary and suspect, suspended in a biopolitical gaze that renders health a function of (2) _____, not autonomy. What is striking, however, is not merely the pervasiveness of this apparatus, but its opacity. Embedded technologies track pulse, breath, temperature — but who interprets? Who decides what qualifies as pathological? The grammar of governance here is not public but procedural, not deliberative but (3) _____. If unchecked, this mode risks normalizing a world in which vigilance masquerades as virtue. The ethical stakes are not peripheral but foundational: in rendering health as measurable, we risk rendering it (4) _____. The ineffable — pain, anxiety, even trust — becomes illegible within a model that privileges only what can be graphed. The challenge, then, is not to reject technology but to reinscribe its terms. Bio-surveillance must be subject to democratic scrutiny, not immune to it. Otherwise, we inherit not safety but a simulated solidarity, and in its name, a deeply (5) _____ submission.</p> <p>What should come in the place of blank number (2)?</p>
	reciprocity
	compliance
	consent
	variability

[Click Here to Challenge Question No.: 181](#)

Q.No: 181	<p>In the given passage, some words have been deleted. Read the passage intently and choose the most appropriate option to fill in each blank:</p> <p>In recent years, bio-surveillance has migrated from the periphery of crisis management into the marrow of everyday governance. What began as a provisional response to epidemiological disruption has, with startling velocity, matured into a (1) _____ instrument of statecraft. The body, once a site of private experience, is now parsed into micro-indicators, archived not as narratives but as anomalies within statistical matrices. The threshold for intervention has shifted — not at diagnosis, but at deviation. Such a regime thrives on a curious inversion: surveillance no longer reacts to illness; it anticipates it. The calculus of care becomes indistinguishable from the logic of control, and protection is no longer offered but enforced. In this architecture, the citizen is both beneficiary and suspect, suspended in a biopolitical gaze that renders health a function of (2) _____, not autonomy. What is striking, however, is not merely the pervasiveness of this apparatus, but its opacity. Embedded technologies track pulse, breath, temperature — but who interprets? Who decides what qualifies as pathological? The grammar of governance here is not public but procedural, not deliberative but (3) _____. If unchecked, this mode risks normalizing a world in which vigilance masquerades as virtue. The ethical stakes are not peripheral but foundational: in rendering health as measurable, we risk rendering it (4) _____. The ineffable — pain, anxiety, even trust — becomes illegible within a model that privileges only what can be graphed. The challenge, then, is not to reject technology but to reinscribe its terms. Bio-surveillance must be subject to democratic scrutiny, not immune to it. Otherwise, we inherit not safety but a simulated solidarity, and in its name, a deeply (5) _____ submission.</p> <p>What should come in the place of blank number (3)?</p>
	ceremonial
	therapeutic
	technocratic
	erratic
Not Answered	

[Click Here to Challenge Question No.: 182](#)

Q.No: 182	<p>In the given passage, some words have been deleted. Read the passage intently and choose the most appropriate option to fill in each blank:</p> <p>In recent years, bio-surveillance has migrated from the periphery of crisis management into the marrow of everyday governance. What began as a provisional response to epidemiological disruption has, with startling velocity, matured into a (1) _____ instrument of statecraft. The body, once a site of private experience, is now parsed into micro-indicators, archived not as narratives but as anomalies within statistical matrices. The threshold for intervention has shifted — not at diagnosis, but at deviation. Such a regime thrives on a curious inversion: surveillance no longer reacts to illness; it anticipates it. The calculus of care becomes indistinguishable from the logic of control, and protection is no longer offered but enforced. In this architecture, the citizen is both beneficiary and suspect, suspended in a biopolitical gaze that renders health a function of (2) _____, not autonomy. What is striking, however, is not merely the pervasiveness of this apparatus, but its opacity. Embedded technologies track pulse, breath, temperature — but who interprets? Who decides what qualifies as pathological? The grammar of governance here is not public but procedural, not deliberative but (3) _____. If unchecked, this mode risks normalizing a world in which vigilance masquerades as virtue. The ethical stakes are not peripheral but foundational: in rendering health as measurable, we risk rendering it (4) _____. The ineffable — pain, anxiety, even trust — becomes illegible within a model that privileges only what can be graphed. The challenge, then, is not to reject technology but to reinscribe its terms. Bio-surveillance must be subject to democratic scrutiny, not immune to it. Otherwise, we inherit not safety but a simulated solidarity, and in its name, a deeply (5) _____ submission.</p> <p>What should come in the place of blank number (4)?</p>
	indispensable
	visible
	mechanical
	subordinate

[Click Here to Challenge Question No.: 183](#)

Q.No: 183	<p>In the given passage, some words have been deleted. Read the passage intently and choose the most appropriate option to fill in each blank:</p> <p>In recent years, bio-surveillance has migrated from the periphery of crisis management into the marrow of everyday governance. What began as a provisional response to epidemiological disruption has, with startling velocity, matured into a (1) _____ instrument of statecraft. The body, once a site of private experience, is now parsed into micro-indicators, archived not as narratives but as anomalies within statistical matrices. The threshold for intervention has shifted — not at diagnosis, but at deviation. Such a regime thrives on a curious inversion: surveillance no longer reacts to illness; it anticipates it. The calculus of care becomes indistinguishable from the logic of control, and protection is no longer offered but enforced. In this architecture, the citizen is both beneficiary and suspect, suspended in a biopolitical gaze that renders health a function of (2) _____, not autonomy. What is striking, however, is not merely the pervasiveness of this apparatus, but its opacity. Embedded technologies track pulse, breath, temperature — but who interprets? Who decides what qualifies as pathological? The grammar of governance here is not public but procedural, not deliberative but (3) _____. If unchecked, this mode risks normalizing a world in which vigilance masquerades as virtue. The ethical stakes are not peripheral but foundational: in rendering health as measurable, we risk rendering it (4) _____. The ineffable — pain, anxiety, even trust — becomes illegible within a model that privileges only what can be graphed. The challenge, then, is not to reject technology but to reinscribe its terms. Bio-surveillance must be subject to democratic scrutiny, not immune to it. Otherwise, we inherit not safety but a simulated solidarity, and in its name, a deeply (5) _____ submission.</p> <p>What should come in the place of blank number (5)?</p>
	intuitive
	symbolic
	unconscious
	performative

[Click Here to Challenge Question No.: 184](#)

Q.No: 184	<p>Identify the correct adverb:</p> <p>He finished the work _____ to avoid missing the deadline.</p>
	hurried
	hurrying
	hurry
	hurriedly

[Click Here to Challenge Question No.: 185](#)

Q.No: 185	<p>Select the correct option:</p> <p>The treaty stipulates that disputes shall be resolved ____ arbitration.</p>
	through
	by
	with
	via

[Click Here to Challenge Question No.: 186](#)

Q.No: 186	<p>Find the part of the sentence that contains an error:</p> <p>The consultant suggested that the firm (1)/ discontinues the outdated product line (2)/ so as to focus more resources (3)/ on innovation. (4)/</p>	https://sscstudy.com/
	(1)	
	(2)	
	(3)	
	(4)	

[Click Here to Challenge Question No.: 187](#)

Q.No: 187	<p>Find the part of the sentence that contains an error:</p> <p>He took such an offense at the remark (1)/ that he refused to speak with the manager (2)/ despite repeated requests made (3)/ on behalf of the HR department. (4)</p>	
	(1)	
	(2)	
	(3)	
	(4)	

Not Answered

[Click Here to Challenge Question No.: 188](#)

Q.No: 188	<p>Change the following from active to passive:</p> <p>Have the archivists digitized the medieval manuscripts yet?</p>	
	Were the medieval manuscripts digitized by the archivists yet?	
	Have the medieval manuscripts been digitized by the archivists yet?	
	Are the medieval manuscripts being digitized by the archivists yet?	
	Had the medieval manuscripts been digitized by the archivists yet?	

[Click Here to Challenge Question No.: 189](#)

Q.No: 189	<p>Change the following from active to passive:</p> <p>The government is said to have downplayed the findings deliberately.</p>	
	The findings are said to be downplayed by the government.	
	It is said that the findings were downplayed deliberately.	
	The findings are said to have been downplayed deliberately by the government.	
	Deliberate findings were said to be downplayed by the government.	

[Click Here to Challenge Question No.: 190](#)

Q.No: 190 **Select the sentence containing the homonym of the highlighted word:**
The **dove** flew above the trees with grace.

She watched the dove as it landed.

A dove perched on the window sill.

He saw the dove headfirst into the challenge.

The diver dove deep into the ocean.

[Click Here to Challenge Question No.: 191](#)

Q.No: 191 **Select the sentence containing the homonym of the highlighted word:**
The sculptor carved a **mensa** for the altar from travertine.

The curator displayed a Roman mensa used in funerary rites.

The monk rested his arms on the marble mensa.

The chef placed the tureen on the mensa.

The logic student solved the truth table using a mensa.

[Click Here to Challenge Question No.: 192](#)

Q.No: 192 **Select the sentence containing the homonym of the highlighted word:**
The chant included a solemn **sursum** near the offertory.

The musicologist analyzed the sursum tones in Gregorian chant.

The botanist labeled the root as sursum-curving.

The cantor raised his arms at the sursum.

The choir followed the rubric leading into the sursum.

Not Answered

[Click Here to Challenge Question No.: 193](#)

Q.No: 193 **Convert the sentence provided below from its passive voice structure to an active voice structure:**
It is presumed that the documents had been tampered with by internal staff before the audit.

Internal staff had tampered with the documents before the audit.

The audit presumed tampering by staff.

The documents were tampered with before the audit.

Presumptions were made regarding document tampering.

[Click Here to Challenge Question No.: 194](#)

Q.No: 194	Convert the sentence provided below from its passive voice structure to an active voice structure: The policy is supposed to have been drafted by external advisors in complete secrecy.
	It was supposed that the advisors externally drafted the policy.
	The policy drafting by external advisors was a secret assumption.
	External advisors are supposed to have drafted the policy in complete secrecy.
	Someone supposed that secrecy was used to draft the policy.

[Click Here to Challenge Question No.: 195](#)

Q.No: 195	Choose the most suitable option to replace the highlighted part of the sentence: He availed of the opportunity well.
	has availed the opportunity
	availed himself of the opportunity
	took the avail
	availed to opportunity

[Click Here to Challenge Question No.: 196](#)

Q.No: 196	Choose the most suitable option to replace the highlighted part of the sentence: If I was you , I would resign immediately.
	was in your place
	were you
	would be you
	am you

[Click Here to Challenge Question No.: 197](#)

Q.No: 197	A sentence is provided in indirect speech. From the four given options, choose the one that most accurately conveys the sentence in its corresponding direct speech. The archivist declared that, unless the humidity controls were recalibrated, the papyri could deteriorate beyond salvage.
	The archivist declared, "Unless the humidity controls are recalibrated, the papyri could deteriorate beyond salvage."
	The archivist declared, "If humidity controls were recalibrated, papyri would deteriorate."
	The archivist declared, "Unless humidity controls were recalibrated, the papyri could deteriorate beyond salvage."
	The archivist declared, "Unless humidity controls were recalibrated, papyri can get deteriorated beyond salvage."

[Click Here to Challenge Question No.: 198](#)

Q.No: 198	<p>A sentence is provided in direct speech. From the four given options, choose the one that most accurately conveys the sentence in its corresponding indirect speech.</p> <p>They said, "We need more time."</p>
<input checked="" type="radio"/>	They said they needed more time.
<input type="radio"/>	They said they need more time.
<input type="radio"/>	They said they had need more time.
<input type="radio"/>	They said that we needed more time.

[Click Here to Challenge Question No.: 199](#)

Q.No: 199	<p>A sentence is provided in indirect speech. From the four given options, choose the one that most accurately conveys the sentence in its corresponding direct speech.</p> <p>The official said that only if the forms were submitted on time would the applications be processed.</p>
<input type="radio"/>	"The applications would be processed only if the forms were submitted on time," said the official.
<input checked="" type="radio"/>	"Only if the forms were submitted on time would the applications be processed," said the official.
<input type="radio"/>	"If forms are submitted on time, the applications would be processed," said the official.
<input type="radio"/>	"Submit forms on time and your applications will be processed," said the official.

Not Answered

[Click Here to Challenge Question No.: 200](#)

Q.No: 200	<p>Rearrange the following sentences in correct order to make a logical passage.</p> <ol style="list-style-type: none"> 1. The team reviews the project deliverables to ensure quality. 2. A detailed timeline is created for the completion of tasks. 3. The progress is evaluated based on the defined metrics. 4. The project is successfully completed within the defined timeline.
<input checked="" type="radio"/>	2-3-1-4
<input type="radio"/>	1-4-3-2
<input type="radio"/>	3-2-1-4
<input type="radio"/>	4-1-2-3