



## CANDIDATE RESPONSE SHEET/GRIEVANCE SYSTEM

[View Your Responses](#)[Click Here to View Grievance Questions](#)Admin loggedin.[ [Logout](#) ]

Roll No.

Exam Level : 

Test Date : 11 Dec 2025

Test Time and Shift : 03:00 PM (Shift-2)

Correct Option selected Wrong Option selected Correct Option Not Answered[Save / Print](#)[Click Here for PART-A](#)[Click Here for PART-B](#)[Click Here for PART-C](#)[Click Here for PART-D](#)

## PART-A (General Intelligence and Reasoning)

[Click Here to Challenge Question No.: 1](#)Q.No: 1 Seminars were held in Delhi, Mumbai, and Kolkata on 1<sup>st</sup>, 4<sup>th</sup>, and 6<sup>th</sup> July.

- The Kolkata seminar happened after the Mumbai one.
- Delhi's seminar was not on 4<sup>th</sup> or 6<sup>th</sup>.

Which date was the Kolkata seminar held?

दिल्ली, मुंबई और कोलकाता में सेमिनार 1<sup>st</sup>, 4<sup>th</sup>, और 6<sup>th</sup> जुलाई को आयोजित किए गए।

- कोलकाता सेमिनार मुंबई के बाद हुआ।
- दिल्ली का सेमिनार 4<sup>th</sup> या 6<sup>th</sup> को नहीं था।

कोलकाता सेमिनार किस तारीख को आयोजित किया गया था?

1<sup>st</sup> July1<sup>st</sup> जुलाई4<sup>th</sup> July4<sup>th</sup> जुलाई6<sup>th</sup> July

Cannot be determined

तय नहीं किया जा सकता

[Click Here to Challenge Question No.: 2](#)

Q.No: 2 Udaipur's seminar occurred 2 days before Jodhpur, Ajmer was 1 day after Jodhpur, and Ajmer's seminar was on 30<sup>th</sup> December. What was the seminar date of Udaipur?

उदयपुर का सेमिनार जोधपुर से 2 दिन पहले हुआ, अजमेर जोधपुर से 1 दिन बाद था, और अजमेर का सेमिनार 30<sup>th</sup> दिसंबर को था। उदयपुर का सेमिनार किस तारीख को था?

25<sup>th</sup> December25<sup>th</sup> दिसंबर26<sup>th</sup> December26<sup>th</sup> दिसंबर27<sup>th</sup> December27<sup>th</sup> दिसंबर28<sup>th</sup> December28<sup>th</sup> दिसंबर[Click Here to Challenge Question No.: 3](#)

Q.No: 3 If  $10 \% 5 = 6$ ,  $8 \% 4 = 6$ , then  $6 \% 2 = ?$

अगर  $10 \% 5 = 6$ ,  $8 \% 4 = 6$ , तो  $6 \% 2 = ?$

2

2

9

9

3

3

7

7

[Click Here to Challenge Question No.: 4](#)

Q.No: 4 If  $8 + 1 = 81$ ,  $6 + 3 = 63$ , then  $5 + 4 = ?$

अगर  $8 + 1 = 81$ ,  $6 + 3 = 63$ , तो  $5 + 4 = ?$

45

45

36

36

54


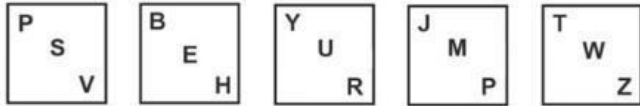
54

81

81

Q.No: 5	In the following number series, the incorrect number is given; find out which number is wrong. 11, 28, 79, 231, 691, 2068 निम्नलिखित संख्या श्रृंखला में गलत संख्या दी गई है; ज्ञात कीजिए कि कौन सी संख्या गलत है। 11, 28, 79, 231, 691, 2068
	231
	231
	691
	691
	2068
	2068
	11
	11

Q.No: 6	If $A \# B = (A + B) \div (A - B)$ , what is $10 \# 5$ ? अगर $A \# B = (A + B) \div (A - B)$ तो $10 \# 5$ क्या है?
	2
	2
	3
	3
	5
	5
	10
	10

Q.No: 7	Out of the following five figures, four are alike in some manner, and one differs from these in that manner. Select the ODD figure.  निम्नलिखित पाँच आकृतियों में से, चार किसी न किसी रूप में समान हैं, और एक उस रूप में इनसे भिन्न है। विषम आकृति का चयन कीजिए। 
---------	--

P  
S  
V

P  
S  
V

T  
W  
Z

T  
W  
Z



Y  
U  
R

Y  
U  
R

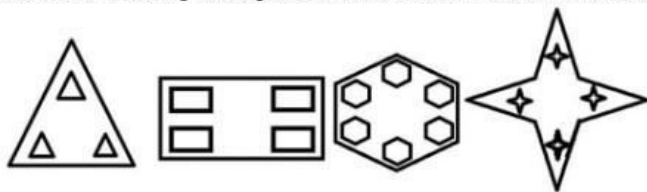
J  
M  
P

J  
M  
P

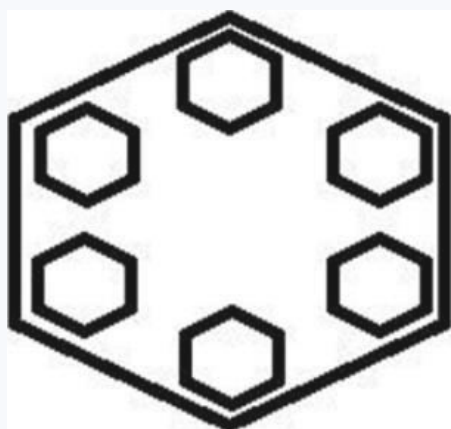
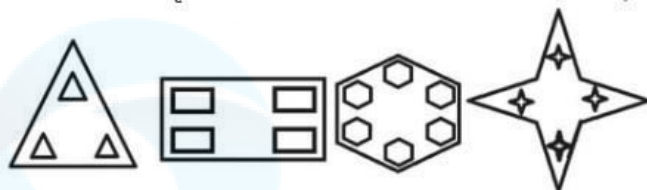
[Click Here to Challenge Question No.: 8](#)

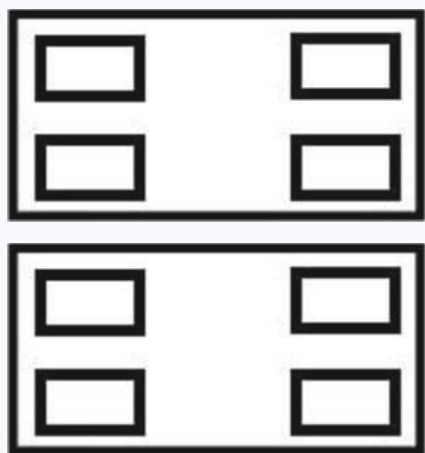
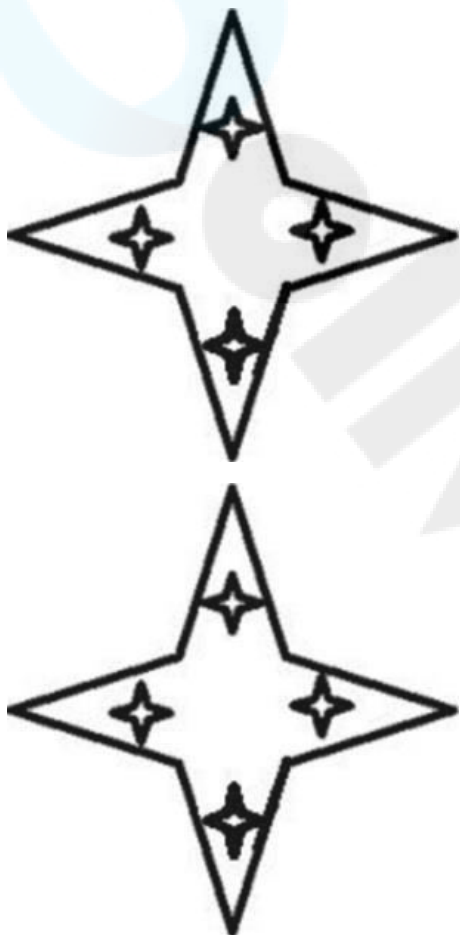
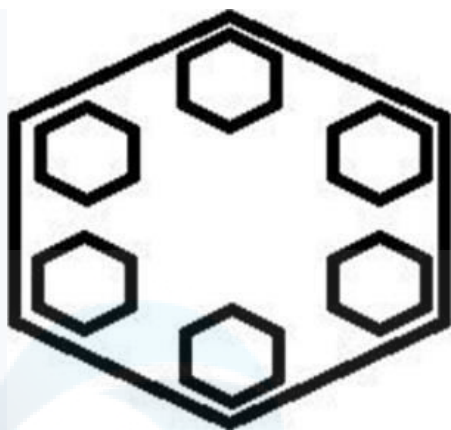
Q.No: 8

Out of the following four figures, three are alike in some manner, and one differs from these in that manner. Select the ODD figure. <https://sscstudy.com/>



निम्नलिखित चार आकृतियों में से तीन किसी न किसी रूप में समान हैं, और एक उस रूप में इनसे भिन्न है। विषम आकृति का चयन कीजिए।





[Click Here to Challenge Question No.: 9](#)

Q.No: 9	Choose the word that doesn't match. वह शब्द चुनें जो मेल नहीं खाता।	<a href="https://sscstudy.com/">https://sscstudy.com/</a>
	Neck गरदन	
	Ear कान	
	Heart दिल	
	Lips होंठ	

[Click Here to Challenge Question No.: 10](#)

Q.No: 10	Select the number from the given options that can replace the question mark (?) in the given series. 54, 70, 102, 150, 214, 294, 390, [?] दिए गए विकल्पों में से वह संख्या चुनिए जो दी गई श्रृंखला में प्रश्न चिन्ह (?) के स्थान पर आ सकती है। 54, 70, 102, 150, 214, 294, 390, [?]	
	456	
	456	
	512	
	512	
	488	
	488	
	502	
	502	

[Click Here to Challenge Question No.: 11](#)

Q.No: 11	Direction: Read the following information and answer the questions asked below.  Eight students A, B, C, D, E, F, G, and H like different subjects namely – English, Hindi, Physics, Computer, Maths, Sanskrit, Chemistry, and Biology but not necessarily in the same order. E likes Sanskrit. B likes either Maths or Physics. H does not like Hindi and English. A likes Chemistry. G neither likes English nor Hindi. D does not like English. G and H do not like Computer. Neither G nor H likes Math. G does not like Biology. Neither C nor D likes Hindi. Which of the following combination is TRUE?  निर्देश: निम्नलिखित जानकारी को पढ़िए और नीचे दिए गए प्रश्नों के उत्तर दीजिए।  आठ छात्र A, B, C, D, E, F, G और H को अलग-अलग विषय पसंद हैं - अंग्रेजी, हिंदी, भौतिकी, कंप्यूटर, गणित, संस्कृत, रसायन विज्ञान और जीव विज्ञान, लेकिन जरूरी नहीं कि इसी क्रम में हों। E को संस्कृत पसंद है। B को या तो गणित या फिर भौतिकी पसंद है। H को हिंदी और अंग्रेजी पसंद नहीं है। A को रसायन विज्ञान पसंद है। G को न तो अंग्रेजी पसंद है और न ही हिंदी। D को अंग्रेजी पसंद नहीं है। G और H को कंप्यूटर पसंद नहीं है। न तो G और न ही H को गणित पसंद है। G को जीव विज्ञान पसंद नहीं है। न तो C और न ही D को हिंदी पसंद है। निम्नलिखित में से कौन सा संयोजन सत्य है?	
	D – Computer D – कंप्यूटर	
	G – Math G – गणित	
	B – Physics B – भौतिकी	
	E – Biology	

[Click Here to Challenge Question No.: 12](#)

Q.No: 12	<p>There are eight members in a family – A, B, C, D, E, F, G and H. D is the wife of E. B and C are brother of D. H is the granddaughter of D. A is the mother of C. F, the only son of E is married to G. F has no siblings.</p> <p>How is C related to F?</p> <p>एक परिवार में आठ सदस्य - A, B, C, D, E, F, G और H हैं। D, E की पत्नी है। B और C, D के भाई हैं। H, D की पोती है। A, C की माँ है। E का इकलौता पुत्र F, G से विवाहित है। F का कोई भाई-बहन नहीं है।</p> <p>C, F से किस प्रकार संबंधित है?</p>
	<p>Brother भाई</p>
	<p>Uncle अंकल</p>
	<p>Father पिता</p>
	<p>Nephew भतीजा</p>

[Click Here to Challenge Question No.: 13](#)

Q.No: 13	<p>Directions: Study the following information carefully to answer the given questions:</p> <p>M@N means M is the wife of N M#N means M is the son of N M%N means M is the Sister of N M \$ N means M is the father of N</p> <p>In the expression "K%L#E \$ F" how is L related to F?</p> <p>निर्देश: दिए गए प्रश्नों के उत्तर देने के लिए निम्नलिखित जानकारी का ध्यानपूर्वक अध्ययन कीजिए:</p> <p>M@N का अर्थ है कि M, N की पत्नी है। M#N का अर्थ है कि M, N का पुत्र है। M%N का अर्थ है कि M, N की बहन है। M \$ N का अर्थ है कि M, N का पिता है।</p> <p>अभिव्यक्ति "K%L#E \$ F" में L, F से किस प्रकार संबंधित है?</p>
	<p>Sister बहन</p>
	<p>Cousin कजन</p>
	<p>Brother भाई</p>
	<p>Brother-in-law ब्रदर-इन-लॉ</p>

[Click Here to Challenge Question No.: 14](#)

Q.No: 14	<p>Complete the series. 0, 3, 6, 9, __, 15</p> <p>निम्नलिखित श्रृंखला को पूरा करें। 0, 3, 6, 9, __, 15</p>
----------	--

12

12

11

11

13

13

14

14

[Click Here to Challenge Question No.: 15](#)

Q.No: 15

What comes next in the series?

M, N, O, P, ?

निम्नलिखित श्रृंखला में अगले स्थान पर कौन सा विकल्प आएगा?

M, N, O, P, ?

T

T

S

S

R

R

Q

Q

[Click Here to Challenge Question No.: 16](#)

Q.No: 16

If MOUSE is written as LNTRD, how is HOUSE written?

अगर MOUSE को LNTRD लिखा जाता है, तो HOUSE को कैसे लिखा जाएगा?

GNTQD

GNTQD

GNSQD

GNSQD

GNTRD

GNTRD

GNTPD

GNTPD

[Click Here to Challenge Question No.: 17](#)

Q.No: 17

Which group of letters does NOT follow the alphabetical sequence pattern?

ABC, DEF, GHI, JKL, JIK

अक्षरों का कौन सा समूह वर्णमाला क्रम पैटर्न का पालन नहीं करता है?

ABC, DEF, GHI, JKL, JIK

GHI

GHI

JIK

JIK

DEF

DEF

[Click Here to Challenge Question No.: 18](#)

Q.No: 18 What comes next?  
QN, RM, SL, ?  
निम्नलिखित श्रृंखला में अगले स्थान पर कौन सा विकल्प आएगा?  
QN, RM, SL, ?

UJ  
UJ

TK  
TK

VI  
VI

WH  
WH

[Click Here to Challenge Question No.: 19](#)

Q.No: 19 If FAN is coded as 6114, what is the code for TOP?  
अगर FAN को 6114 के रूप में कोड किया गया है, तो TOP के लिए कोड क्या है?

201516  
201516

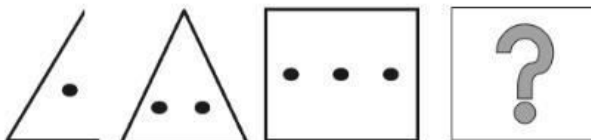
201615  
201615

151620  
151620

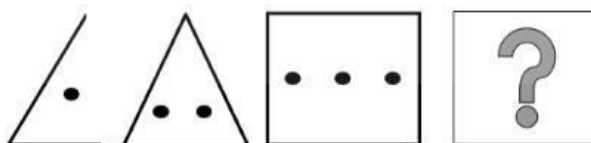
152016  
152016





[Click Here to Challenge Question No.: 20](#)

Q.No: 20 Find the one which completes the series:  
Question figure:

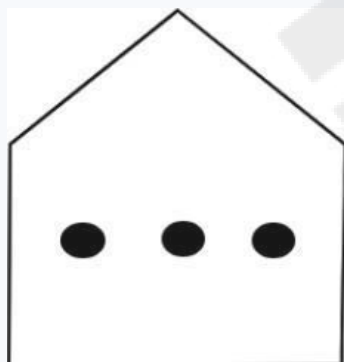




वह आकृति ज्ञात कीजिए जो श्रृंखला को पूरा करती है:  
प्रश्न आकृति:









[Click Here to Challenge Question No.: 21](#)

Q.No: 21 Figure 1 and 2 are related with each other in some particular way. Find the relationship and establish the same relationship between 3 and 4 from the given four alternatives.

Figure 1:

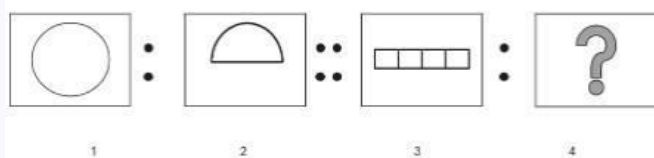
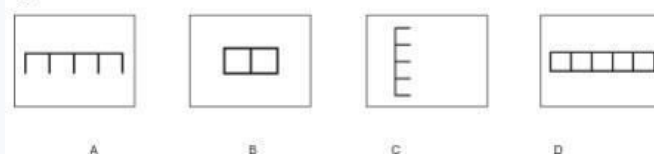
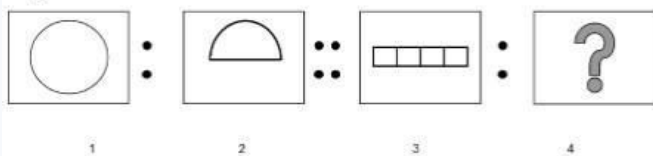


Figure 2:

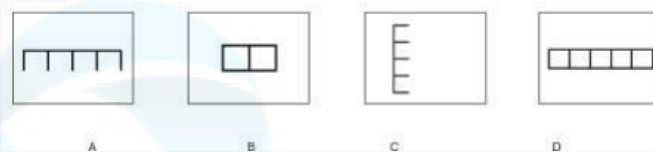


आकृति 1 और 2 किसी विशेष तरीके से एक-दूसरे से संबंधित हैं। दिए गए चार विकल्पों में से 3 और 4 के बीच संबंध ज्ञात कीजिए। <https://sscstudy.com/>

आकृति 1:



आकृति 1:



A  
A

B  
B

C  
C

D  
D

[Click Here to Challenge Question No.: 22](#)

Q.No: 22 What is the letter at (2,3)?

	0	1	2	3	4
0	J	B	D	C	L
1	F	I	A	J	H
2	D	A	K	L	E
3	B	K	G	I	A
4	K	C	E	L	L

(2,3) पर कौन सा अक्षर है?

	0	1	2	3	4
0	J	B	D	C	L
1	F	I	A	J	H
2	D	A	K	L	E
3	B	K	G	I	A
4	K	C	E	L	L

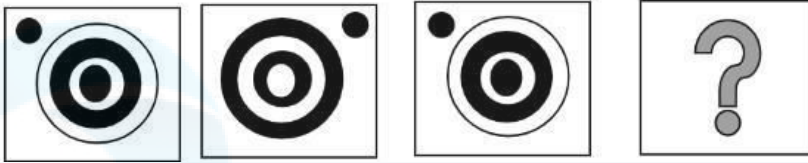
L  
L

K  
K



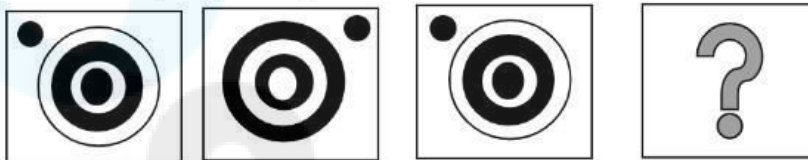
C  
C


[Click Here to Challenge Question No.: 23](#)

Q.No: 23 Find the one which completes the series:



वह विकल्प ज्ञात कीजिए जो श्रृंखला को पूरा करता है:






[Click Here to Challenge Question No.: 24](#)

Q.No: 24 Find the odd one out in this series.  
Mars, Earth, Saturn, Sun, Neptune, Mercury

इस श्रृंखला में विषम को चुनें।  
मंगल, पृथ्वी, शनि, सूर्य, नेपच्यून, बुध

Earth  
पृथ्वी

Sun  
सूर्य

Mercury  
बुध

Mars  
मंगल

[Click Here to Challenge Question No.: 25](#)

Q.No: 25 In the following, four roll numbers or centre codes are given. Three share a common pattern or belong to one group, but one is different. Select the odd one out.

440311, 441214, 440598, 681210

निम्नलिखित में चार रोल नंबर या केंद्र कोड दिए गए हैं। तीन एक ही नमूना साझा करते हैं या एक ही समूह से संबंधित हैं, लेकिन एक अलग है। बेमेल को चुनें।

440311, 441214, 440598, 681210

440311  
440311

441214  
441214

440598  
440598

[Click Here to Challenge Question No.: 26](#)

Q.No: 26 Complete the analogy.

L : I :: P : ?

सादृश्य को पूर्ण कीजिए।

L : I :: P : ?

L

L

K

K

M

M

N

N

[Click Here to Challenge Question No.: 27](#)

Q.No: 27 Find the missing term in the series: AB, CDE, FGHI, JKLMN, ?

निम्न श्रेणी में लुप्त पद ज्ञात कीजिए।

AB, CDE, FGHI, JKLMN, ?

OPQRST

OPQRST

OPRT

OPRT

OPQRS

OPQRS

OPQRT

OPQRT

[Click Here to Challenge Question No.: 28](#)

Q.No: 28 Complete the analogy.

Cobbler : Leather :: Carpenter : ?

उपमा पूरी कीजिए।

मोची : चमड़ा :: बढ़ई : ?

Cloth

कपड़ा

Iron

लोहा

Plastic

प्लास्टिक

Wood

लकड़ी

[Click Here to Challenge Question No.: 29](#)

Q.No: 29	Complete the analogy. Hermit : Seclusion :: Judge : ? उपमा पूरी कीजिए। साधु : एकांतवास :: न्यायाधीश : ?
	Verdict निर्णय
	Impartiality निष्पक्षता
	Courtroom अदालत
	Audience श्रोता

[Click Here to Challenge Question No.: 30](#)

Q.No: 30	Select the option that does NOT belong to the same category as the others: Pythagoras, Archimedes, Newton, Einstein उस विकल्प का चयन कीजिए, जो अन्य विकल्पों की श्रेणी से संबंधित नहीं है। पाइथागोरस, आर्किमिडीज, न्यूटन, आइंस्टीन
	Pythagoras पाइथागोरस
	Archimedes आर्किमिडीज
	Newton न्यूटन
	Einstein आइंस्टीन

[Click Here to Challenge Question No.: 31](#)

Q.No: 31	Find the odd one out in the given semantic series based on the pattern identified. Duckling, Calf, Cub, Foal पहचाने गए पैटर्न के आधार पर दी गई अर्थ श्रृंखला में से विषम को ज्ञात कीजिए। बत्तख का बच्चा, बछड़ा, शवक, बछेड़ा
	Duckling बत्तख का बच्चा
	Calf बछड़ा
	Cub शवक
	Foal बछेड़ा

[Click Here to Challenge Question No.: 32](#)

Q.No: 32	Find the odd one out in the given semantic series based on the pattern identified. Hawk, Crow, Bat, Owl पहचाने गए पैटर्न के आधार पर दी गई अर्थ श्रृंखला में से विषम को ज्ञात कीजिए। बाज़, कौआ, चमगादड़, उल्लू
	Hawk बाज़
	Crow कौआ
	Bat चमगादड़
	Owl उल्लू

[Click Here to Challenge Question No.: 33](#)

Q.No: 33	Select the option that does NOT belong to the same category as the others: 27, 64, 100, 125 उस विकल्प का चयन कीजिए जो अन्य तीन विकल्पों से संबंधित नहीं है। 27, 64, 100, 125
	27 27
	64 64
	100 100
	125 125

[Click Here to Challenge Question No.: 34](#)

Q.No: 34	Select the option that does NOT belong to the same category as the others: 9, 16, 25, 49 उस विकल्प का चयन कीजिए जो अन्य तीन विकल्पों से संबंधित नहीं है। 9, 16, 25, 49
	9 9
	16 16
	25 25
	49 49



[Click Here to Challenge Question No.: 35](#)

Q.No: 35	<p>Four people, J, K, L, and M, live on floors 1-4. K is below L; M is immediately above K; J is not on the ground.</p> <p>Who lives on floor 2?</p> <p>चार व्यक्ति, J, K, L और M, 1 से 4 तल पर रहते हैं। K, L के नीचे रहता है; M, K के ठीक ऊपर रहता है; J भूतल पर नहीं रहता है।</p> <p>दूसरे तल पर कौन रहता है?</p>
	J
	J
	K
	K
	M
	M
	L
	L

[Click Here to Challenge Question No.: 36](#)

Q.No: 36	<p>Five friends live in houses 2, 4, 6, 8, and 10. Raj lives in the adjacent 2nd house after Aman.</p> <p>If Aman is at 4, where does Raj live?</p> <p>पाँच मित्र मकान 2, 4, 6, 8 और 10 में रहते हैं। राज, अमन के बाद वाले दूसरे मकान में रहता है।</p> <p>यदि अमन मकान संख्या 4 में रहता है, तो राज कहाँ रहता है?</p>
	6
	6
	2
	2
	10
	10
	8
	8

[Click Here to Challenge Question No.: 37](#)

Q.No: 37	<p>Crops in several villages have dried up despite irrigation systems in place.</p> <p>What is the most probable cause?</p> <p>सिंचाई व्यवस्था होने के बावजूद कई गांवों में फसलें सूख गई हैं।</p> <p>सबसे संभावित कारण क्या है?</p>
	Excess rainfall this season
	इस मौसम में अत्यधिक वर्षा
	Farmers using new crop varieties
	किसान नई फसल किस्मों का उपयोग कर रहे हैं
	Government subsidies stopped
	सरकारी सब्सिडी बंद हो गई
	Poor maintenance of irrigation channels
	सिंचाई चैनलों का खराब रखरखाव

[Click Here to Challenge Question No.: 38](#)

Q.No: 38	<p>A classmate is very quiet in group work.</p> <p>How do you engage them?</p> <p>एक सहपाठी समूह कार्य में बहुत शांत रहता है।</p> <p>आप उन्हें कैसे संलग्न करते हैं?</p>
	<p>Take all the work yourself</p> <p>सारा काम आप ही ले लो</p>
	<p>Let them do nothing</p> <p>उन्हें कुछ नहीं करने दो</p>
	<p>Criticise them publicly</p> <p>उनकी सार्वजनिक रूप से आलोचना करें</p>
	<p>Ask their opinion directly</p> <p>सीधे उनकी राय पूछें</p>

[Click Here to Challenge Question No.: 39](#)

Q.No: 39	<p>A colleague is frustrated with the constant changes in project scope and complains regularly.</p> <p>What is the best emotional response?</p> <p>एक सहकर्मी परियोजना के दायरे में लगातार हो रहे बदलावों से निराश है और नियमित रूप से शिकायत करता है।</p> <p>सबसे अच्छी भावनात्मक प्रतिक्रिया क्या है?</p>
	<p>Empathise, validate annoyance and discuss coping strategies</p> <p>सहानुभूति रखें, झुंझलाहट को मान्य करें और सामना करने की रणनीतियों पर चर्चा करें</p>
	<p>Ignore their stress and continue working</p> <p>उनके तनाव को नज़रअंदाज़ करें और काम करते रहें</p>
	<p>Ask them to stop complaining</p> <p>उनसे शिकायत करना बंद करने के लिए कहें</p>
	<p>Complain to them about management</p> <p>उनसे प्रबंधन के बारे में शिकायत करें</p>

[Click Here to Challenge Question No.: 40](#)

Q.No: 40	<p>Arrange these alphabetically and select the option that comes first in the dictionary:</p> <p>CHALK, CHAIN, CHAIR, CHANCE</p> <p>दिए गए शब्दों को वर्णानुक्रम में व्यवस्थित कीजिए तथा शब्दकोश में सबसे पहले आने वाले शब्द का चयन कीजिए।</p> <p>CHALK, CHAIN, CHAIR, CHANCE</p>
	<p>CHAIR</p> <p>CHAIR</p>
	<p>CHAIN</p> <p>CHAIN</p>
	<p>CHALK</p> <p>CHALK</p>

[Click Here to Challenge Question No.: 41](#)

Q.No: 41 Which of the following words would appear last in alphabetical order?

GHOST, GHOUL, GHOSH, GHOSE

निम्नलिखित शब्दों में से कौन-सा शब्द वर्णमाला क्रम में अंत में आएगा?

GHOST, GHOUL, GHOSH, GHOSE

GHOST

GHOST

GHOUL

GHOUL

GHOSH

GHOSH

GHOSE

GHOSE

[Click Here to Challenge Question No.: 42](#)

Q.No: 42 Two team members are in conflict, affecting work.

As team lead, what is your best step?

दो टीम सदस्यों में विवाद हो रहा है, जिससे काम प्रभावित हो रहा है।  
टीम लीड के रूप में आपका सबसे अच्छा कदम क्या होगा?

Arrange mediation between them

उनके बीच मध्यस्थता की व्यवस्था करें

Ignore it in the hope it resolves

इस उम्मीद में इसे अनदेखा करें कि यह हल हो जाएगा

Report both to HR instantly

दोनों की शिकायत तुरंत एचआर (HR) को कर देना।

Take sides

किसी एक का पक्ष लेना।

[Click Here to Challenge Question No.: 43](#)

Q.No: 43 You forgot to complete an assigned task.

What is the best decision?

आप एक निर्धारित कार्य पूरा करना भूल गए। सबसे अच्छा निर्णय क्या है?

Hide your mistake

अपनी गलती छुपाओ

Blame someone else

किसी और को दोष दो

Inform the supervisor and fix it quickly

पर्यवेक्षक को सूचित करें और इसे शीघ्र ठीक करें

[Click Here to Challenge Question No.: 44](#)

Q.No: 44	<p>In a hospital, non-local patients wait longer for appointments compared to local patients with similar conditions.</p> <p>Which inference is valid?</p> <p>किसी अस्पताल में, समान स्थिति वाले स्थानीय मरीजों की तुलना में गैर-स्थानीय मरीजों को अपॉइंटमेंट के लिए अधिक समय तक प्रतीक्षा करनी पड़ती है।</p> <p>कौन सा अनुमान सही है?</p>
	<p>Locals need faster treatment</p> <p>स्थानीय लोगों को जल्दी इलाज चाहिए</p>
	<p>Locals pay more</p> <p>स्थानीय लोग अधिक भुगतान करते हैं</p>
	<p>Non-locals have more serious illnesses</p> <p>गैर-स्थानीय लोगों को अधिक गंभीर बीमारियाँ होती हैं</p>
	<p>Preference for local patients</p> <p>स्थानीय मरीजों को प्राथमिकता</p>

[Click Here to Challenge Question No.: 45](#)

Q.No: 45	<p>In the following question, two statements are followed by four conclusions. You have to assume the given statements to be true, even if they seem to be at variance with commonly known facts. Read the conclusions carefully and then decide which of the given conclusions logically follows from the statements.</p> <p>Statements:</p> <p>Some flowers are roses.</p> <p>All roses are red.</p> <p>Conclusions:</p> <p>I. Some flowers are red</p> <p>II. All flowers are roses</p> <p>III. No flower is rose</p> <p>IV. All roses are flowers</p> <p>Which of the above conclusions definitely follows?</p> <p>निम्नलिखित प्रश्न में दो कथन और उसके बाद चार निष्कर्ष दिए गए हैं। आपको दिए गए कथनों को सत्य मानना है, भले ही वे सामान्यतः ज्ञात तथ्यों से भिन्न प्रतीत होते हों। निष्कर्षों को ध्यानपूर्वक पढ़िए और फिर निर्णय कीजिए कि दिए गए निष्कर्षों में से कौन सा निष्कर्ष कथनों का तार्किक रूप से अनुसरण करता है।</p> <p>कथन:</p> <p>कुछ फूल, गुलाब हैं।</p> <p>सभी गुलाब, लाल हैं।</p> <p>निष्कर्ष:</p> <p>I. कुछ फूल लाल हैं।</p> <p>II. सभी फूल, गुलाब हैं।</p> <p>III. कोई फूल, गुलाब नहीं है।</p> <p>IV. सभी गुलाब, फूल हैं।</p> <p>उपरोक्त में से कौन सा निष्कर्ष निश्चित रूप से सही है?</p>
	<p>Both I and II</p> <p>I और II दोनों</p>
	<p>Only II</p> <p>केवल II</p>
	<p>Only I</p> <p>केवल I</p>

[Click Here to Challenge Question No.: 46](#)

Q.No: 46	<p>In the following question, two statements are followed by four conclusions. You have to assume the given statements to be true, even if they seem to be at variance with commonly known facts. Read the conclusions carefully and then decide which of the given conclusions logically follows from the statements.</p> <p>Statements: No trains are buses. All buses are vehicles.</p> <p>Conclusions: I. Some trains are vehicles II. No train is vehicle III. All vehicles are buses IV. Some vehicles are buses</p> <p>निम्नलिखित प्रश्न में दो कथन और उसके बाद चार निष्कर्ष दिए गए हैं। आपको दिए गए कथनों को सत्य मानना है, भले ही वे सामान्यतः ज्ञात तथ्यों से भिन्न प्रतीत होते हों। निष्कर्षों को ध्यानपूर्वक पढ़िए और फिर निर्णय कीजिए कि दिए गए निष्कर्षों में से कौन सा निष्कर्ष कथनों का तार्किक रूप से अनुसरण करता है।</p> <p>कथन: कोई भी रेलगाड़ी, बस नहीं है। सभी बसें, वाहन हैं।</p> <p>निष्कर्ष: I. कुछ रेलगाड़ियाँ, वाहन हैं। II. कोई भी रेलगाड़ी, वाहन नहीं है। III. सभी वाहन, बस हैं। IV. कुछ वाहन, बस हैं।</p>
	Only I केवल I
	Both II and III II और III दोनों
	Both I and II I और II दोनों
	Only IV केवल IV

[Click Here to Challenge Question No.: 47](#)

Q.No: 47	<p>Rajiv is the brother of Arun. Sonia is Sunil's sister. Arun is the son of Sonia. How is Rajiv related to Sunil?</p> <p>राजीव, अरुण का भाई है। सोनिया, सुनील की बहन है। अरुण, सोनिया का पुत्र है। राजीव का सुनील से क्या संबंध है?</p>
	Uncle चाचा/मामा
	Brother भाई
	Cousin कजिन
	Nephew भतीजा/भांजा

Q.No: 48	Statement: "The education board will now conduct teacher training every quarter". Which conclusion follows? कथन : "शिक्षा बोर्ड अब हर तिमाही में शिक्षक प्रशिक्षण आयोजित करेगा।" कौन-सा निष्कर्ष अनुसरण करता है?
	Online classes will be discontinued ऑनलाइन कक्षाएँ बंद कर दी जाएँगी।
	Students fail because of teachers शिक्षकों के कारण छात्र असफल होते हैं
	Teacher skills need regular updates शिक्षक कौशल को नियमित अद्यतन की आवश्यकता है
	Teachers are unhappy with current conditions शिक्षक वर्तमान परिस्थितियों से असंतुष्ट हैं।

Q.No: 49	Complete the analogy. ACE : GIK :: BDF : ? सादृश्य पूर्ण करें। ACE : GIK :: BDF : ?
	ILM ILM
	IKL IKL
	HJM HJM
	HJL HJL

Q.No: 50	Find the missing number in the series: 1,3,7,15,? निम्न श्रेणी में लुप्त संख्या ज्ञात कीजिए। 1,3,7,15,?
	28 28
	29 29
	31 31
	33 33



## CANDIDATE RESPONSE SHEET/GRIEVANCE SYSTEM

[View Your Responses](#)[Click Here to View Grievance Questions](#)Admin loggedin.[ [Logout](#) ]

Roll No.

Exam Level

: 

Test Date

: 11 Dec 2025

Test Time and Shift

: 03:00 PM (Shift-2)

[Correct Option selected](#) [Wrong Option selected](#) [Correct Option](#) [Not Answered](#)[Save / Print](#)**Undertaking by the candidate :**

I acknowledge that this saved question paper is for my personal use and self-analysis only. I understand that sharing, distributing, or using it for commercial or any other purposes is strictly prohibited and may lead to legal action as per applicable acts, rules and regulations.

**Note:**

The candidates may note that in the challenge module the sequence of the questions and the options may be different from how it appeared during the examination. This is because in the challenge module the sequence of the questions as well as the answers will be the same for all the candidates who appeared in a particular shift while during the actual examination these sequences were different for different candidates. However the answer key selected by the candidates during the examination will exactly be reflected in the challenge module.

[Click Here for PART-A](#)[Click Here for PART-B](#)[Click Here for PART-C](#)[Click Here for PART-D](#)**PART-B (General Knowledge and General Awareness)**[Click Here to Challenge Question No.: 51](#)

Q.No: 51	The "capability approach" as applied to the Human Development Index (HDI) has been criticized for: मानव विकास सूचकांक (एचडीआई) पर लागू "क्षमता दृष्टिकोण" की आलोचना इस लिए की गई है:
	Being too focused on economic factors. आर्थिक कारकों पर अत्यधिक ध्यान केन्द्रित करना।
	Being difficult to operationalize and measure. परिचालन एवं मापन कठिन होना।
	Ignoring life expectancy. जीवन प्रत्याशा को अनदेखा करना।
	Overemphasizing educational data. शैक्षिक आंकड़ों पर अत्यधिक जोर देना।

[Click Here to Challenge Question No.: 52](#)



Q.No: 52	The term "Amaram" in Vijayanagara administration was associated with: विजयनगर प्रशासन में "अमराम" शब्द किससे जुड़ा था:	<a href="https://sscstudy.com/">https://sscstudy.com/</a>
	Tax exemption कर में छूट	
	Military fief सैन्य जागीर	
	Land redistribution भूमि पुनर्वितरण	
	Merchant guilds व्यापारी संघ	

[Click Here to Challenge Question No.: 53](#)

Q.No: 53	The architectural feature of the true arch and dome in India was first introduced by the: भारत में सच्चे मेहराब और गुंबद की स्थापत्य विशेषता को सबसे पहले किसने पेश किया था?	
	Ghaznavids गज़नविड्स	
	Delhi Sultanate दिल्ली सल्तनत	
	Rashtrakutas राष्ट्रकूट	
	Chalukyas चालुक्य	

[Click Here to Challenge Question No.: 54](#)

Q.No: 54	Which committee was instrumental in recommending changes to the Centre-State relations in India? भारत में केंद्र-राज्य संबंधों में परिवर्तन की सिफारिश करने में किस समिति की महत्वपूर्ण भूमिका थी?	
	Ashok Mehta Committee अशोक मेहता समिति	
	Balwant Rai Mehta Committee बलवंत राय मेहता समिति	
	Sarkaria Commission सरकारिया आयोग	
	Punchhi Commission पुंछी आयोग	

[Click Here to Challenge Question No.: 55](#)

Q.No: 55	The Indian athlete, Avinash Sable, specializes in which track and field event? भारतीय एथलीट अविनाश साबले किस ट्रैक एंड फील्ड स्पर्धा में विशेषज्ञ हैं?	
	400m hurdles 400 मीटर बाधा दौड़	
	Long jump लॉन्ग जंप	



स्टीपलचेज़

Shot put

शॉट पुट

[Click Here to Challenge Question No.: 56](#)

Q.No: 56 The "Vallamkali" boat races of Kerala feature which unique type of boat, known for its length and speed?  
केरल की "वल्लमकलि" नौका दौड़ में किस विशिष्ट प्रकार की नौका का उपयोग किया जाता है, जो अपनी लंबाई और गति के लिए जानी जाती है?

Houseboat

हाउसबोट

Kettuvallam

केट्टुवल्लम

Chundan Vallam

चुंदन वल्लम

Odi Vallam

ओडी वल्लम

[Click Here to Challenge Question No.: 57](#)

Q.No: 57 The 2010 Commonwealth Games were a significant event in India. Which metropolitan city hosted the games?  
2010 के राष्ट्रमंडल खेल भारत में एक महत्वपूर्ण आयोजन थे। किस महानगरीय शहर ने इन खेलों की मेजबानी की?

Mumbai

मुंबई

New Delhi

नई दिल्ली

Chennai

चेन्नई

Kolkata

कोलकाता

[Click Here to Challenge Question No.: 58](#)

Q.No: 58 By which concept are the Mughal style of gardens in India inspired ?  
भारत में मुगल शैली के उद्यान किस अवधारणा से प्रेरित हैं?

Sacred groves of Vedic times

वैदिक काल के पवित्र उपवन

The Persian idea of paradise gardens

स्वर्ग उद्यानों का फ़ारसी विचार

Stepwell architecture

बावड़ी वास्तुकला

British botanical gardens

ब्रिटिश वनस्पति उद्यान

Q.No: 59	The Bhimakali Temple in Sarahan is a fine example of which architectural style? सराहन स्थित भीमाकाली मंदिर किस स्थापत्य शैली का उत्कृष्ट उदाहरण है?
	Chalukyan चालुक्य
	Kath-Kuni काठ-कुणी
	Dravidian द्रविड़
	Indo-Gothic इंडो-गोथिक

Not Answered

Q.No: 60	Which Chinese-American author's novel "The Joy Luck Club" became internationally acclaimed and adapted into a film in 1993? किस चीनी-अमेरिकी लेखक के उपन्यास "द जॉय लक क्लब" को अंतर्राष्ट्रीय स्तर पर प्रशंसा मिली और 1993 में उस पर फिल्म भी बनाई गई?
	Amy Tan एमी टैन
	Celeste Ng सेलेस्टे एनजी
	Maxine Hong Kingston मैक्सिन हांग किंगस्टन
	Lisa See लिसा सी

Not Answered

Q.No: 61	Which Indian weightlifter won silver in the Tokyo Olympics 2020? टोक्यो ओलंपिक 2020 में किस भारतीय भारोत्तोलक ने रजत पदक जीता?
	Sanjita Chanu संजीता चानू
	Mirabai Chanu मीराबाई चानू
	Gurdeep Singh गुरदीप सिंह
	Bindyarani Devi बिंद्यारानी देवी

Q.No: 62	To which goddess is the festival of Navratri dedicated to? नवरात्रि का त्यौहार किस देवी को समर्पित है?
----------	---

	Parvati पार्वती	<a href="https://sscstudy.com/">https://sscstudy.com/</a>
	Lakshmi लक्ष्मी	
	Durga दुर्गा	
	Saraswati सरस्वती	

[Click Here to Challenge Question No.: 63](#)

Q.No: 63	What is unique about Kuchipudi performances? कुचीपुड़ी प्रदर्शन की क्या विशिष्टता है?
	They are performed as solos only इन्हें केवल एकल के रूप में ही प्रस्तुत किया जाता है
	They combine dance, mime, and acting वे नृत्य, मूकाभिनय और अभिनय का मिश्रण करते हैं
	They have no vocal music उनके पास कोई मुखर संगीत नहीं है
	They focus on martial arts वे मार्शल आर्ट पर ध्यान केंद्रित करते हैं

[Click Here to Challenge Question No.: 64](#)

Q.No: 64	Which instrument in Kathakali is primarily used to create the rhythmic base for the performance? कथकली में किस वाद्य यंत्र का प्रयोग मुख्यतः प्रदर्शन के लिए लयबद्ध आधार तैयार करने के लिए किया जाता है?
	Pakhawaj पखावज
	Chenda चेन्दा
	Veena वीणा
	Tabla तबला

[Click Here to Challenge Question No.: 65](#)

Q.No: 65	During the Pallava period, what do the terms Brahmadeya and Devadana refer to? पल्लव काल के दौरान, ब्रह्मदेय और देवदान शब्द किसको संदर्भित करते थे?
	Educational Institutions शिक्षण संस्थानों
	Administrative Titles प्रशासनिक उपाधियाँ
	Land grants भूमि अनुदान

[Click Here to Challenge Question No.: 66](#)

Q.No: 66 The Garuda pillar at Besnagar was erected by:  
बेसनगर में गरुड़ स्तंभ का निर्माण निम्नलिखित के द्वारा किया गया था:

Menander

मेनांडर

Pushyamitra Sunga

पुष्यमित्र शुंग

Heliodorus

हेलियोडोरस

Kanishka

कनिष्क

Not Answered

[Click Here to Challenge Question No.: 67](#)

Q.No: 67 Which folk music form from Rajasthan is sophisticated and similar to Thumri or Ghazal?  
राजस्थान का कौन सा लोक संगीत परिष्कृत है और ठुमरी या ग़ज़ल के समान है?

Maand

मांड

Panihari

पनिहारी

Garba

गरबा

Baul

बाउल

[Click Here to Challenge Question No.: 68](#)

Q.No: 68 Which instrument is commonly associated with ceremonial music in Northern India, especially in marriages and temple festivals?  
उत्तरी भारत में, विशेष रूप से विवाह और मंदिर उत्सवों में, कौन सा वाद्य आमतौर पर औपचारिक संगीत से जुड़ा हुआ है?

Bansuri

बांसुरी

Shehnai

शहनाई

Santoor

संतूर

Sarod

सरोद

[Click Here to Challenge Question No.: 69](#)

Q.No: 69	<p>The classical theory of monsoon development was propounded by Sir Edmond Halley. With this reference, which of the following statements is/are correct?</p> <p>1. During the summer monsoon, the air flows from the sea to land and brings heavy rainfall to the Indian subcontinent.</p> <p>2. During the winter monsoon, the air flows from land to sea and carries very little moisture.</p> <p>मानसून विकास का शास्त्रीय सिद्धांत सर एडमंड हैली द्वारा प्रतिपादित किया गया था। इस संदर्भ में, निम्नलिखित में से कौन सा कथन सही है/हैं?</p> <p>1. ग्रीष्मकालीन मानसून के दौरान, हवा समुद्र से भूमि की ओर बहती है और भारतीय उपमहाद्वीप में भारी वर्षा लाती है।</p> <p>2. शीतकालीन मानसून के दौरान, हवा भूमि से समुद्र की ओर बहती है और बहुत कम नमी ले जाती है।</p>
	<p>1 only</p> <p>केवल 1</p>
	<p>2 only</p> <p>केवल 2</p>
	<p>Both 1 and 2</p> <p>1 और 2 दोनों</p>
	<p>Neither 1 nor 2</p> <p>न तो 1, न ही 2</p>

[Click Here to Challenge Question No.: 70](#)

Q.No: 70	<p>Which of the following best describes the Rajini Gerba ritual?</p> <p>निम्नलिखित में से कौन सा कथन रजनी गेरबा अनुष्ठान का सबसे अच्छा वर्णन करता है?</p>
	<p>Harvest-thanksgiving dance</p> <p>फसल-धन्यवाद नृत्य</p>
	<p>Temple-renovation ceremony</p> <p>मंदिर-नवीनीकरण समारोह</p>
	<p>Purificatory animal-sacrifice ritual</p> <p>शुद्धिकरण हेतु पशु-बलि अनुष्ठान</p>
	<p>Community storytelling event</p> <p>सामुदायिक कहानी सुनाने का कार्यक्रम</p>

[Click Here to Challenge Question No.: 71](#)

Q.No: 71	<p><b>Fill in the blank:</b></p> <p>The Indian Councils Act 1892 for the first time permitted legislative councils to ____.</p> <p><b>रिक्त स्थान भरें:</b></p> <p>भारतीय परिषद अधिनियम 1892 ने पहली बार विधान परिषदों को ____ की अनुमति दी।</p>
	<p>discuss the annual budget</p> <p>वार्षिक बजट पर चर्चा करने</p>
	<p>pass criminal laws</p> <p>आपराधिक कानून पारित करने</p>
	<p>levy provincial taxes</p> <p>प्रांतीय कर लगाने</p>
	<p>overrule the Viceroy</p> <p>वायसराय को खारिज करने</p>

Q.No: 72	How did the Bombay and Madras governments respond to the proposal of the 1839 Draft Act on slavery? दास प्रथा पर 1839 के मसौदा अधिनियम के प्रस्ताव पर बम्बई और मद्रास सरकारों की क्या प्रतिक्रिया थी?
	Both supported the Act without changes दोनों ने बिना किसी बदलाव के अधिनियम का समर्थन किया
	Bombay supported it, Madras rejected it बम्बई ने इसका समर्थन किया, मद्रास ने इसे अस्वीकार कर दिया
	Bombay saw no need for a law; Madras questioned its expediency बम्बई को कानून की कोई आवश्यकता नहीं दिखी; मद्रास ने इसकी उपयोगिता पर सवाल उठाया
	Both governments demanded full enforcement of the Act दोनों सरकारों ने अधिनियम के पूर्ण क्रियान्वयन की मांग की

Q.No: 73	Who is the author of 'Madam President: The Biography of Droupadi Murmu'? 'मैडम प्रेसिडेंट: द बायोग्राफी ऑफ द्रौपदी मुर्मू' के लेखक कौन हैं?
	Kasturi Ray कस्तूरी रे
	Sandeep Sahu संदीप साहू
	Dr Kabita Barik डॉ. कबिता बारिक
	Gopal Sharma गोपाल शर्मा

Q.No: 74	Who became the third Indian to win the Billie Jean King Cup Heart Award for the Asia/Oceania region in 2024? 2024 में एशिया/ओशिनिया क्षेत्र के लिए बिली जिन किंग कप हार्ट अवार्ड जीतने वाले तीसरे भारतीय कौन बने?
	Ankita Raina अंकिता रैना
	Sania Mirza सानिया मिर्ज़ा
	Karman Kaur Thandi करमन कौर थांडी
	Shrivalli Bhamidipaty श्रीवल्ली भामिदीपती

Q.No: 75	On 8th March 2025, the nation observed the Jayanti of which social reformer and founder of the Matua Sect, known for leading the Chandal movement against untouchability? 8 मार्च 2025 को, राष्ट्र ने किस समाज सुधारक और मतुआ संप्रदाय के संस्थापक की जयंती मनाई, जिन्हें अस्पृश्यता के खिलाफ चांडाल आंदोलन का नेतृत्व करने के लिए जाना जाता है?
	Shree Harichand Thakur

	श्री हरिचंद ठाकुर	<a href="https://sscstudy.com/">https://sscstudy.com/</a>
	Shree Narayan Guru श्री नारायण गुरु	
	Shree Jyotirao Phule श्री ज्योतिराव फुले	
	Shree Guru Ravidas श्री गुरु रविदास	

[Click Here to Challenge Question No.: 76](#)

Q.No: 76	Which of the following statements about the Indian Desert is/are correct? 1. It lies to the west of the Aravali Hills. 2. It receives an average annual rainfall of over 250 mm. भारतीय रेगिस्तान के बारे में निम्नलिखित में से कौन सा/से कथन सही है/हैं? 1. यह अरावली पहाड़ियों के पश्चिम में स्थित है। 2. यहाँ औसत वार्षिक वर्षा 250 मिमी से अधिक होती है।
	Only 1 केवल 1
	Only 2 केवल 2
	1 and 2 both are correct 1 और 2 दोनों सही हैं
	Neither 1 nor 2 are correct न तो 1 और न ही 2 सही हैं

[Click Here to Challenge Question No.: 77](#)

Q.No: 77	Which of the following states had the highest level of urbanization in India as per the 2011 Census? 2011 की जनगणना के अनुसार भारत में निम्नलिखित में से किस राज्य में शहरीकरण का स्तर सबसे अधिक था?
	Kerala केरल
	Goa गोवा
	Tamil Nadu तमिलनाडु
	West Bengal पश्चिम बंगाल

[Click Here to Challenge Question No.: 78](#)

Q.No: 78	Which launch vehicle has been approved by the Union Cabinet to support India's Bharatiya Antariksh Station and a crewed Moon landing mission by 2040? भारत के भारतीय अंतरिक्ष स्टेशन और 2040 तक मानवयुक्त चंद्रमा लैंडिंग मिशन का समर्थन करने के लिए केंद्रीय मंत्रिमंडल ने किस प्रक्षेपण वाहन को मंजूरी दी है?
	GSLV Mk II जीएसएलवी एमके II
	PSLV-C50



	पीएसएलवी-सी50	<a href="https://sscstudy.com/">https://sscstudy.com/</a>
	Next Generation Launch Vehicle (NGLV) अगली पीढ़ी के प्रक्षेपण यान (एनजीएलवी)	
	Human Rated Launch System (HRLS) मानव रेटेड प्रक्षेपण प्रणाली (एमआरएलएस)	

[Click Here to Challenge Question No.: 79](#)

Q.No: 79	President Droupadi Murmu was recently conferred with the highest civilian award of which of the following countries during her 2024 state visit? राष्ट्रपति द्रौपदी मुर्मू को हाल ही में उनकी 2024 की राजकीय यात्रा के दौरान निम्नलिखित में से किस देश के सर्वोच्च नागरिक पुरस्कार से सम्मानित किया गया?
	Suriname – Grand Order of the Yellow Star सूरीनाम - ग्रैंड ऑर्डर ऑफ़ द येलो स्टार
	Timor-Leste – Grand Collar of the Order तिमोर-लेस्ते - ग्रैंड कॉलर ऑफ़ द ऑर्डर
	Mauritius – Order of the Star and Key मॉरीशस - ऑर्डर ऑफ़ द स्टार एंड की
	Australia's – Companion of the Order (AC) ऑस्ट्रेलिया का - कम्पैनियन ऑफ़ द ऑर्डर (एसी)

[Click Here to Challenge Question No.: 80](#)

Q.No: 80	Consider the following statements about India's population growth since 1981 and choose the correct option: 1. The rate of population growth began to decline gradually after 1981. 2. Birth rates continued to rise sharply in the 1990s. 3. Despite declining growth rate, 182 million people were added in the 1990s.  <b>1981 से भारत की जनसंख्या वृद्धि के बारे में निम्नलिखित कथनों पर विचार कीजिए और सही विकल्प चुनिए:</b> 1. 1981 के बाद जनसंख्या वृद्धि दर धीरे-धीरे कम होने लगी। 2. 1990 के दशक में जन्म दर में तेज़ी से वृद्धि जारी रही। 3. घटती वृद्धि दर के बावजूद, 1990 के दशक में 182 मिलियन लोग जुड़े।
	Only 1 and 2 are correct केवल 1 और 2 सही हैं
	Only 2 and 3 are correct केवल 2 और 3 सही हैं
	Only 1 and 3 are correct केवल 1 और 3 सही हैं
	All 1,2 and 3 all are correct सभी 1,2 और 3 सही हैं

[Click Here to Challenge Question No.: 81](#)

Q.No: 81	Which of the following oil fields is located in Assam? निम्नलिखित में से कौन सा तेल क्षेत्र असम में स्थित है?
	Kharsang खरसांग
	Cambay खंभात



[Click Here to Challenge Question No.: 82](#)

Q.No: 82	What was the key purpose of the DS-SAR satellite launched aboard PSLV-C56 on July 30, 2023? 30 जुलाई, 2023 को PSLV-C56 के माध्यम से प्रक्षेपित DS-SAR उपग्रह का मुख्य उद्देश्य क्या था?
	For TV broadcasting in Southeast Asia दक्षिण पूर्व एशिया में टीवी प्रसारण के लिए
	For SAR imaging for Singapore's govt and clients सिंगापुर की सरकार और ग्राहकों के लिए SAR इमेजिंग के लिए
	For asteroid exploration beyond Mars मंगल ग्रह से परे क्षुद्रग्रह अन्वेषण के लिए
	For measuring upper stratosphere gases ऊपरी समताप मंडल गैसों को मापने के लिए

[Click Here to Challenge Question No.: 83](#)

Q.No: 83	Which of the following statements <b>correctly</b> describe the RLV-LEX-02 landing experiment conducted by ISRO?  1. The Pushpak vehicle was released from 4.5 km altitude at 4 km distance from the runway and performed cross-range corrections before landing. 2. The winged body and flight systems from RLV-LEX-01 were reused in RLV-LEX-02 without any structural strengthening. 3. The mission validated indigenous technologies like navigation, control, and landing gear systems required for autonomous space-return landings. निम्नलिखित में से कौन सा कथन इसरो द्वारा किए गए RLV-LEX-02 लैंडिंग प्रयोग का <b>सही</b> वर्णन करता है? 1. पुष्पक यान को रनवे से 4 किमी की दूरी पर 4.5 किमी की ऊँचाई से छोड़ा गया और लैंडिंग से पहले क्रॉस-रेंज सुधार किए गए। 2. RLV-LEX-01 के पंखयुक्त ढाँचे और उड़ान प्रणालियों का बिना किसी संरचनात्मक सुदृढ़ीकरण के RLV-LEX-02 में पुनः उपयोग किया गया। 3. इस मिशन ने स्वायत्त अंतरिक्ष-वापसी लैंडिंग के लिए आवश्यक नेविगेशन, नियंत्रण और लैंडिंग गियर प्रणालियों जैसी स्वदेशी तकनीकों को मान्यता प्रदान की।
	Only Statements 1 and 2 are correct केवल कथन 1 और 2 सही हैं
	Only Statements 2 and 3 are correct केवल कथन 2 और 3 सही हैं
	Only Statements 1 and 3 are correct केवल कथन 1 और 3 सही हैं
	1, 2 and 3 all statements are correct 1, 2 और 3 सभी कथन सही हैं

[Click Here to Challenge Question No.: 84](#)

Q.No: 84	Which vitamin is synthesized by intestinal microbiota? कौन सा विटामिन आंत के माइक्रोबायोटा द्वारा संश्लेषित होता है?
	Vitamin C विटामिन C
	Vitamin K विटामिन K

	Vitamin E विटामिन E	<a href="https://sscstudy.com/">https://sscstudy.com/</a>
	Vitamin D विटामिन D	
Not Answered		

<a href="#">Click Here to Challenge Question No.: 85</a>		
Q.No: 85	Which of the following pairs of (Plants-type) is <b>correctly</b> matched? निम्नलिखित में से कौन सा युग्म (पौधे-प्रकार) सही सुमेलित है?	
	Nepenthes – Parasitic plant नेपेंथेस - परजीवी पौधा	
	Cuscuta – Insectivorous plant अमरबेल – कीटभक्षी पौधा	
	Opuntia – Xerophytic plant ओपंटिया - जीरोफाइटिक पौधा	
	Utricularia – Epiphytic plant यूट्रिकुलरिया - एपिफाइटिक पौधा	
Not Answered		

<a href="#">Click Here to Challenge Question No.: 86</a>		
Q.No: 86	Which new power has been given to the Magistrate under Bharatiya Nagarik Suraksha Sanhita(BNSS) regarding preliminary inquiry for serious cases? गंभीर मामलों की प्रारंभिक जांच के संबंध में भारतीय नागरिक सुरक्षा संहिता (बीएनएसएस) के तहत मजिस्ट्रेट को कौन सी नई शक्ति दी गई है?	
	Power to issue a death warrant directly. सीधे मृत्यु वारंट जारी करने की शक्ति।	
	Power to direct preliminary inquiry in cases punishable with 7 years or more. 7 वर्ष या उससे अधिक की सजा वाले मामलों में प्रारंभिक जांच का निर्देश देने की शक्ति।	
	Power to grant anticipatory bail without hearing the police. पुलिस को सुने बिना अग्रिम जमानत देने की शक्ति।	
	Power to quash FIRs on their own motion. स्वप्रेरणा से एफआईआर रद्द करने की शक्ति।	

<a href="#">Click Here to Challenge Question No.: 87</a>		
Q.No: 87	The Uniform Civil Code (UCC) of Uttarakhand officially came into effect on which date? उत्तराखंड में समान नागरिक संहिता (यूसीसी) आधिकारिक तौर पर किस तारीख को लागू हुई?	
	March 13, 2024 13 मार्च, 2024	
	January 1, 2024 1 जनवरी, 2024	
	January 1, 2025 1 जनवरी, 2025	

[Click Here to Challenge Question No.: 88](#)

Q.No: 88 Which scheme provides insurance to farmers against crop failure?

कौन सी योजना किसानों को फसल खराब होने पर बीमा प्रदान करती है?

RKVY (Rashtriya Krishi Vikas Yojana)

आरकेवीवाई (राष्ट्रीय कृषि विकास योजना)

PMFBY (Pradhan Mantri Fasal Bima Yojana)

पीएमएफबीवाई (प्रधानमंत्री फसल बीमा योजना)

SMAM (Sub-Mission on Agricultural Mechanization)

एसएमएएम (कृषि मशीनीकरण पर उप-मिशन)

AIF (Agriculture Infrastructure Fund)

एआईएफ (कृषि अवसंरचना कोष)

[Click Here to Challenge Question No.: 89](#)

Q.No: 89 Under PM Gati Shakti, who is responsible for nodal planning?

पीएम गति शक्ति के तहत नोडल योजना के लिए कौन जिम्मेदार है?

MoF

एम ओ एफ

DPIIT

डीपीआईआईटी

MHA

गृह मंत्रालय

TRAI

ट्राई

[Click Here to Challenge Question No.: 90](#)

Q.No: 90 The capital account in the government budget deals with:

सरकारी बजट में पूंजी खाता निम्नलिखित से संबंधित होता है:

Only interest payments

केवल ब्याज भुगतान

Current subsidies and salaries

वर्तमान सब्सिडी और वेतन

Assets and liabilities of the government

सरकार की संपत्तियां और देनदारियां

Tax collections and customs duties

कर संग्रह और सीमा शुल्क

[Click Here to Challenge Question No.: 91](#)

Q.No: 91	<p><b>Read the following statements and select the appropriate option:</b></p> <p><b>Statement 1:</b> A budget deficit is encountered when the total expenditure of the government is greater than its total revenue, excluding borrowings.</p> <p><b>Statement 2:</b> A budget deficit is faced when the total revenue of the government is greater than its expenditure in a fiscal year.</p> <p><b>निम्नलिखित कथनों को पढ़ें और उपयुक्त विकल्प चुनें:</b></p> <p><b>कथन 1:</b> बजट घाटा तब होता है जब सरकार का कुल व्यय, उधार को छोड़कर, उसके कुल राजस्व से अधिक होता है।</p> <p><b>कथन 2:</b> बजट घाटा तब होता है जब सरकार का कुल राजस्व किसी वित्तीय वर्ष में उसके व्यय से अधिक होता है।</p>
	<p>Only Statement 1 is correct</p> <p>केवल कथन 1 सही है</p>
	<p>Only Statement 2 is correct</p> <p>केवल कथन 2 सही है</p>
	<p>Both Statement 1 and Statement 2 are correct</p> <p>कथन 1 और कथन 2 दोनों सही हैं</p>
	<p>Neither Statement 1 nor Statement 2 is correct</p> <p>न तो कथन 1 और न ही कथन 2 सही है</p>

[Click Here to Challenge Question No.: 92](#)

Q.No: 92	<p>Which organization publishes the World Competitiveness Ranking?</p> <p>कौन सा संगठन विश्व प्रतिस्पर्धात्मकता रैंकिंग प्रकाशित करता है?</p>
	<p>World Bank</p> <p>विश्व बैंक</p>
	<p>IMF</p> <p>आईएमएफ</p>
	<p>IMD</p> <p>आईएमडी</p>
	<p>World Economic Forum</p> <p>विश्व आर्थिक मंच</p>

[Click Here to Challenge Question No.: 93](#)

Q.No: 93	<p>Rash Behari Bose was a key figure in forming the Indian Independence League and played a crucial role in the initial organization of which army?</p> <p>रास बिहारी बोस भारतीय स्वतंत्रता लीग के गठन में एक प्रमुख व्यक्ति थे और उन्होंने किस सेना के प्रारंभिक संगठन में महत्वपूर्ण भूमिका निभाई थी?</p>
	<p>Azad Hind Fauj</p> <p>आज़ाद हिंद फौज</p>
	<p>Royal Indian Army</p> <p>रॉयल इंडियन आर्मी</p>
	<p>Gorkha Regiment</p> <p>गोरखा रेजिमेंट</p>
	<p>Sikh Light Infantry</p> <p>सिख लाइट इन्फैंट्री</p>

[Click Here to Challenge Question No.: 94](#)

Q.No: 94	<p>Read the following statements and mark the correct option:</p> <p><b>Assertion (A):</b> Matangini Hazra died while participating in a Salt March in Odisha.</p> <p><b>Reason (R):</b> She was shot by police while holding the national flag during the Quit India Movement.</p> <p><b>निम्नलिखित कथनों को पढ़िए और सही विकल्प पर निशान लगाइए:</b></p> <p><b>कथन (A):</b> मातंगिनी हाजरा की मृत्यु ओडिशा में नमक मार्च में भाग लेते समय हुई।</p> <p><b>कारण (R):</b> भारत छोड़ो आंदोलन के दौरान राष्ट्रीय ध्वज थामे हुए पुलिस ने उन्हें गोली मार दी थी।</p>
	<p>Both A and R are true, and R is the correct explanation of A.</p> <p>A और R दोनों सत्य हैं, तथा R, A का सही स्पष्टीकरण है।</p>
	<p>Both A and R are true, but R is not the correct explanation of A.</p> <p>A और R दोनों सत्य हैं, लेकिन R, A का सही स्पष्टीकरण नहीं है।</p>
	<p>A is false, but R is true.</p> <p>A गलत है, लेकिन R सत्य है।</p>
	<p>Both A and R are false.</p> <p>A और R दोनों गलत हैं।</p>

[Click Here to Challenge Question No.: 95](#)

Q.No: 95	<p>Which of the following is <b>correctly classified</b> as a basic industry?</p> <p>निम्नलिखित में से किसे <b>सही रूप से</b> मूल उद्योग के रूप में वर्गीकृत किया गया है?</p>
	<p>Sugar</p> <p>चीनी</p>
	<p>Fans</p> <p>पंखा</p>
	<p>Sewing machines</p> <p>सिलाई मशीनें</p>
	<p>Aluminium smelting</p> <p>एल्युमीनियम प्रगलन</p>

[Click Here to Challenge Question No.: 96](#)

Q.No: 96	<p>Read the following Assertion (A) and Reason (R) carefully and choose the <b>correct</b> option.</p> <p><b>Assertion (A):</b> The Karve Committee (1955) supported rural industrialisation.</p> <p><b>Reason (R):</b> It focused on large-scale capital-intensive manufacturing in urban centres.</p> <p><b>निम्नलिखित अभिकथन (A) और कारण (R) को ध्यानपूर्वक पढ़ें और सही विकल्प चुनें।</b></p> <p><b>अभिकथन (A):</b> कर्वे समिति (1955) ने ग्रामीण औद्योगीकरण का समर्थन किया।</p> <p><b>कारण (R):</b> इसने शहरी केंद्रों में बड़े पैमाने पर पूंजी-गहन विनिर्माण पर ध्यान केंद्रित किया।</p>
	<p>Both A and R are true and R is the correct explanation of A.</p> <p>A और R दोनों सत्य हैं और R, A का सही स्पष्टीकरण है।</p>
	<p>Both A and R are true but R is not the correct explanation of A.</p> <p>A और R दोनों सत्य हैं लेकिन R, A का सही स्पष्टीकरण नहीं है।</p>
	<p>A is true but R is false.</p> <p>A सत्य है लेकिन R असत्य है।</p>
	<p>A is false but R is true.</p> <p>A गलत है लेकिन R सत्य है।</p>

Not Answered



Q.No: 97	<p>Read the following Assertion (A) and Reason (R) carefully and choose the <b>correct</b> option.</p> <p><b>Assertion (A):</b> The planning approach between 1951–1990 led to a successful transformation of India's employment structure.</p> <p><b>Reason (R):</b> Over 65% of India's workforce remained dependent on agriculture during this period.</p> <p>निम्नलिखित अभिकथन (A) और कारण (R) को ध्यानपूर्वक पढ़ें और सही विकल्प चुनें।</p> <p>अभिकथन (A): 1951-1990 के बीच नियोजन दृष्टिकोण ने भारत की रोजगार संरचना में सफल परिवर्तन किया।</p> <p>कारण (R): इस अवधि के दौरान भारत का 65% से अधिक कार्यबल कृषि पर निर्भर रहा।</p>
	<p>Both A and R are true and R is the correct explanation of A.</p> <p>A और R दोनों सत्य हैं और R, A का सही स्पष्टीकरण है।</p>
	<p>Both A and R are true but R is not the correct explanation of A.</p> <p>A और R दोनों सत्य हैं लेकिन R, A का सही स्पष्टीकरण नहीं है।</p>
	<p>A is true but R is false.</p> <p>A सत्य है लेकिन R असत्य है।</p>
	<p>A is false but R is true.</p> <p>A गलत है लेकिन R सत्य है।</p>

Q.No: 98	<p>Consider the following statements regarding the National Electricity Plan 2023:</p> <ol style="list-style-type: none"> <li>1. It projects over 50% installed power capacity from non-fossil sources by 2030.</li> <li>2. It proposes nationwide shutdown of thermal plants older than 25 years.</li> </ol> <p>Which of the following is/are <b>Correct</b>?</p> <p>राष्ट्रीय विद्युत योजना 2023 के संबंध में निम्नलिखित कथनों पर विचार करें:</p> <ol style="list-style-type: none"> <li>1. यह 2030 तक गैर-जीवाश्म स्रोतों से 50% से अधिक स्थापित विद्युत क्षमता का अनुमान लगाती है।</li> <li>2. यह 25 वर्ष से अधिक पुराने ताप विद्युत संयंत्रों को देशव्यापी बंद करने का प्रस्ताव करती है।</li> </ol> <p>निम्नलिखित में से कौन सा <b>सही है/हैं</b>?</p>
	<p>Only 1</p> <p>केवल 1</p>
	<p>Only 2</p> <p>केवल 2</p>
	<p>1 and 2</p> <p>1 और 2</p>
	<p>Neither 1 nor 2</p> <p>न तो 1 और न ही 2</p>

Q.No: 99	<p>Which global body promotes liberal economic reforms?</p> <p>कौन सा वैश्विक निकाय उदार आर्थिक सुधारों को बढ़ावा देता है?</p>
	<p>UNDP</p> <p>यूएनडीपी</p>
	<p>IMF</p> <p>आईएमएफ</p>
	<p>WHO</p> <p>डब्ल्यूएचओ</p>
	<p>UNESCO</p> <p>यूनेस्को</p>

[Click Here to Challenge Question No.: 100](#)

Q.No: 100	Which of the following is an indirect tax? निम्नलिखित में से कौन सा अप्रत्यक्ष कर है?
	Income Tax आयकर
	Corporation Tax निगम कर
	Excise Duty उत्पाद शुल्क
	Wealth Tax संपत्ति कर



## CANDIDATE RESPONSE SHEET/GRIEVANCE SYSTEM

[View Your Responses](#)[Click Here to View Grievance Questions](#)Admin loggedin. [ [Logout](#) ]

Roll No.

Exam Level

: 

Test Date

: 11 Dec 2025

Test Time and Shift

: 03:00 PM (Shift-2)

[Correct Option selected](#) [Wrong Option selected](#) [Correct Option](#) [Not Answered](#)[Save / Print](#)**Undertaking by the candidate :**

I acknowledge that this saved question paper is for my personal use and self-analysis only. I understand that sharing, distributing, or using it for commercial or any other purposes is strictly prohibited and may lead to legal action as per applicable acts, rules and regulations.

**Note:**

The candidates may note that in the challenge module the sequence of the questions and the options may be different from how it appeared during the examination. This is because in the challenge module the sequence of the questions as well as the answers will be the same for all the candidates who appeared in a particular shift while during the actual examination these sequences were different for different candidates. However the answer key selected by the candidates during the examination will exactly be reflected in the challenge module.

[Click Here for PART-A](#)[Click Here for PART-B](#)[Click Here for PART-C](#)[Click Here for PART-D](#)**PART-C (Quantitative Aptitude)**[Click Here to Challenge Question No.: 101](#)

Q.No: 101 If Roshan lent Rs. 6,000 at 9% per annum compound interest, what will be the amount needs to pay after 2 years?

अगर रोशन ने 9% प्रति वर्ष चक्रवृद्धि ब्याज पर 6,000 रुपये उधार दिए, तो 2 वर्ष बाद उसे कितनी राशि चुकानी होगी?

7,528.60

7,528.60

7,428.60

7,428.60

7,128.60

7,128.60

7,228.60

7,228.60

[Click Here to Challenge Question No.: 102](#)

Q.No: 102 A sum of money amounts to Rs. 800 in 3 years and to Rs. 920 in 4 years at some rate of simple interest. The sum is how much?

एक धनराशि साधारण ब्याज की किसी दर पर 3 वर्षों में 800 रुपये और 4 वर्षों में 920 रुपये हो जाती है। कुल धनराशि कितनी है?



	400
	400
	440
	440
	350
	350
	380
	380

[Click Here to Challenge Question No.: 103](#)

Q.No: 103	Which of these number sets is NOT a subset of real numbers? इनमें से कौन सा संख्या समूह वास्तविक संख्याओं का उपसमूह नहीं है?
	Integers पूर्णांक
	Natural Numbers प्राकृतिक संख्याएँ
	Whole Numbers पूर्ण संख्याएँ
	Complex Numbers सम्मिश्र संख्याएँ

[Click Here to Challenge Question No.: 104](#)

Q.No: 104	A rectangular parallelepiped is made by joining two cubes of side 6 cm along one face. Find its surface area. 6 सेंटीमीटर भुजा वाले दो घनों को एक फलक के अनुदिश जोड़कर एक आयताकार समांतर चतुर्भुज बनाया गया है। इसका पृष्ठीय क्षेत्रफल ज्ञात कीजिए।
	432 cm <sup>2</sup> 432 वर्ग सेंटीमीटर
	360 cm <sup>2</sup> 360 वर्ग सेंटीमीटर
	576 cm <sup>2</sup> 576 वर्ग सेंटीमीटर
	648 cm <sup>2</sup> 648 वर्ग सेंटीमीटर

[Click Here to Challenge Question No.: 105](#)

Q.No: 105	If the radii of two spheres have a ratio of 4:3, What is the ratio of their surface areas? यदि दो गोलों की त्रिज्याओं का अनुपात 4:3 है, तो उनके पृष्ठीय क्षेत्रफलों का अनुपात क्या होगा?
	2:3 2:3
	8:27 8:27
	16:9 16:9
	4:9 4:9

[Click Here to Challenge Question No.: 106](#)

Q.No: 106	A cylinder has a radius $R$ and a height $2R$ . A hemisphere has a radius $R$ . What is the ratio of their volumes (Cylinder: Hemisphere)? एक बेलन की त्रिज्या $R$ और ऊँचाई $2R$ है। एक अर्धगोले की त्रिज्या $R$ है। उनके आयतनों का अनुपात क्या है (बेलन: अर्धगोला)?
	3:1
	3:1
	5:1
	5:1
	6:1
	6:1
	4:1
	4:1

[Click Here to Challenge Question No.: 107](#)

Q.No: 107	The dimensions of a rectangular parallelepiped are in the proportion of 3:4:5. If its volume is $480\text{cm}^3$ , what is its largest dimension? एक आयताकार समांतर चतुर्भुज की विमाएँ 3:4:5 के अनुपात में हैं। यदि इसका आयतन $480\text{cm}^3$ है, तो इसका सबसे बड़ा विमा क्या है?
	6cm
	6 सेमी
	8cm
	8 सेमी
	10cm
	10 सेमी
	12cm
	12 सेमी

[Click Here to Challenge Question No.: 108](#)

Q.No: 108	A box with dimensions $15\text{ cm} \times 12\text{ cm} \times 10\text{ cm}$ is completely filled with cubes of side $1\text{ cm}$ . How many cubes are used? $15\text{ सेमी} \times 12\text{ सेमी} \times 10\text{ सेमी}$ विमाओं वाला एक बक्सा $1\text{ सेमी}$ भुजा वाले घनों से पूरी तरह भरा हुआ है। कितने घनों का उपयोग किया गया है?
	1800
	1800
	1500
	1500
	1600
	1600
	1700
	1700

[Click Here to Challenge Question No.: 109](#)

Q.No: 109	The height of a cone is $30\text{ cm}$ . It is cut by a plane at height $10\text{ cm}$ from the base. What percent of the cone's volume lies above the cut? एक शंकु की ऊँचाई $30\text{ सेमी}$ है। इसे आधार से $10\text{ सेमी}$ ऊँचाई पर एक समतल से काटा गया है। शंकु के आयतन का कितना प्रतिशत भाग कटे हुए भाग के ऊपर है?
	11.10%
	11.10%

	29.60%	29.60%	<a href="https://sscstudy.com/">https://sscstudy.com/</a>
	18.50%	18.50%	
	22.20%	22.20%	
Not Answered			

<a href="#">Click Here to Challenge Question No.: 110</a>			
Q.No: 110	A piece of ribbon is 5.4 m long. It is cut into pieces of 0.9 m each. How many pieces? रिबन का एक टुकड़ा 5.4 मीटर लंबा है। इसे 0.9 मीटर के टुकड़ों में काटा जाता है। कितने टुकड़े होंगे?		
	6	6	
	5	5	
	8	8	
	9	9	

<a href="#">Click Here to Challenge Question No.: 111</a>			
Q.No: 111	If $a + b + c = 15$ , $ab + bc + ca = 48$ and $abc = 16$ , then find the value of $a^3 + b^3 + c^3$ . अगर $a + b + c = 15$ , $ab + bc + ca = 48$ और $abc = 16$ है, तो $a^3 + b^3 + c^3$ का मान ज्ञात कीजिए।		
	1212	1212	
	1263	1263	
	1321	1321	
	1441	1441	

<a href="#">Click Here to Challenge Question No.: 112</a>			
Q.No: 112	Expand: $(5x - 3)^2 = ?$ विस्तृत करें: $(5x - 3)^2 = ?$		
	$25x^2 - 15x + 9$	$25x^2 - 15x + 9$	
	$25x^2 + 30x - 9$	$25x^2 + 30x - 9$	
	$25x^2 + 30x + 9$	$25x^2 + 30x + 9$	
	$25x^2 - 30x + 9$	$25x^2 - 30x + 9$	

[Click Here to Challenge Question No.: 113](#)

Q.No: 113	A right square pyramid has a base side measuring 6 cm and a height of 8 cm. Calculate its volume. एक समकोण वर्गाकार पिरामिड की आधार भुजा 6 सेमी और ऊँचाई 8 सेमी है। इसका आयतन ज्ञात कीजिए।
	72 cm <sup>3</sup> 72 सेमी <sup>3</sup>
	96 cm <sup>3</sup> 96 सेमी <sup>3</sup>
	100 cm <sup>3</sup> 100 सेमी <sup>3</sup>
	120 cm <sup>3</sup> 120 सेमी <sup>3</sup>

[Click Here to Challenge Question No.: 114](#)

Q.No: 114	A person walks 0.75 km in one round. How many rounds to cover $6\frac{3}{4}$ km? एक व्यक्ति एक चक्कर में 0.75 किमी चलता है। $6\frac{3}{4}$ किमी की दूरी तय करने के लिए उसे कितने चक्कर लगाने होंगे?
	7 7
	8 8
	9 9
	10 10

[Click Here to Challenge Question No.: 115](#)

Q.No: 115	The sum of all interior angles of a regular polygon is 1080°. How many diagonals does the polygon have? एक समबहुभुज के सभी आंतरिक कोणों का योग 1080° है। इस बहुभुज में कितने विकर्ण हैं?
	20 20
	21 21
	18 18
	19 19

[Click Here to Challenge Question No.: 116](#)

Q.No: 116	A pyramid has a base of 9 cm side. If its height is increased by 50% and base remains same, by what percentage does volume increase? एक पिरामिड का आधार 9 सेमी भुजा का है। यदि इसकी ऊँचाई 50% बढ़ा दी जाए और आधार वही रहे, तो आयतन में कितने प्रतिशत की वृद्धि होगी?
-----------	---

	20%
	20%
	30%
	30%
	40%
	40%
	50%
	50%

[Click Here to Challenge Question No.: 117](#)

Q.No: 117	A mixture contains 2.5 L of milk and 1.75 L of water. What fraction of the mixture is water? एक मिश्रण में 2.5 लीटर दूध और 1.75 लीटर पानी है। मिश्रण में पानी का कितना भाग है?
	$\frac{7}{18}$
	$\frac{7}{18}$
	$\frac{7}{20}$
	$\frac{7}{20}$
	$\frac{1}{3}$
	$\frac{1}{3}$
	$\frac{7}{17}$
	$\frac{7}{17}$

[Click Here to Challenge Question No.: 118](#)

Q.No: 118	What decimal is equal to: $\frac{5\frac{2}{3} - 3\frac{3}{5}}{1\frac{1}{5}}$ दशमलव निम्नलिखित के बराबर है: $\frac{5\frac{2}{3} - 3\frac{3}{5}}{1\frac{1}{5}}$
-----------	--

	1.54
	1.54
	1.72
	1.72
	2.67
	2.67
	2.25
	2.25

[Click Here to Challenge Question No.: 119](#)

Q.No: 119	A circular disc of radius 10 cm is cut into 4 equal parts. What is the area of each part? 10 सेंटीमीटर त्रिज्या वाली एक वृत्ताकार डिस्क को 4 बराबर भागों में काटा जाता है। प्रत्येक भाग का क्षेत्रफल क्या है?
	$34\pi \text{ cm}^2$ 34 $\pi$ वर्ग सेंटीमीटर
	$26\pi \text{ cm}^2$ 26 $\pi$ वर्ग सेंटीमीटर
	$25\pi \text{ cm}^2$ 25 $\pi$ वर्ग सेंटीमीटर
	$56\pi \text{ cm}^2$ 56 $\pi$ वर्ग सेंटीमीटर

[Click Here to Challenge Question No.: 120](#)

Q.No: 120	A metal wire is bent into the form of a circle of radius 21 cm. If it is rebent into a square, what is the length of a side? एक धातु के तार को 21 सेंटीमीटर त्रिज्या वाले एक वृत्त के आकार में मोड़ा गया है। यदि इसे पुनः एक वर्ग के आकार में मोड़ा जाए, तो इसकी भुजा की लंबाई क्या होगी?
	33 cm 33 सेंटीमीटर
	44 cm 44 सेंटीमीटर
	42 cm 42 सेंटीमीटर
	36 cm 36 सेंटीमीटर

[Click Here to Challenge Question No.: 121](#)

Q.No: 121	A and B can complete a task in 12 days together. A is 25% more efficient than B. What percentage of the work is done by A alone? A और B मिलकर एक काम को 12 दिनों में पूरा कर सकते हैं। A, B से 25% अधिक कुशल है। A द्वारा अकेले किया गया कार्य कितना प्रतिशत है?
	55.56% 55.56%
	60.6% 60.6%

62.5%  
62.5%  
66.66%  
66.66%

[Click Here to Challenge Question No.: 122](#)

Q.No: 122	<p>A square paper is cut into 16 smaller equal square pieces. If the perimeter of each small piece is 24 cm, find the area of the original paper.</p> <p>एक वर्गाकार कागज़ को 16 छोटे बराबर वर्गाकार टुकड़ों में काटा जाता है। अगर प्रत्येक छोटे टुकड़े का परिमाप 24 सेमी है, तो मूल कागज़ का क्षेत्रफल ज्ञात कीजिए।</p>
	<p>144 cm<sup>2</sup> 144 सेमी<sup>2</sup></p>
	<p>576 cm<sup>2</sup> 576 सेमी<sup>2</sup></p>
	<p>1024 cm<sup>2</sup> 1024 सेमी<sup>2</sup></p>
	<p>1296 cm<sup>2</sup> 1296 सेमी<sup>2</sup></p>

[Click Here to Challenge Question No.: 123](#)

Q.No: 123	<p>The sides of a trapezium are 8 cm, 10 cm, 12 cm and 14 cm, with 12 cm and 8 cm being the parallel sides. If height = 6 cm, find area.</p> <p>एक समलम्ब चतुर्भुज की भुजाएँ 8 सेमी, 10 सेमी, 12 सेमी और 14 सेमी हैं, जिनमें 12 सेमी और 8 सेमी समांतर भुजाएँ हैं। यदि ऊँचाई = 6 सेमी है, तो क्षेत्रफल ज्ञात कीजिए।</p>
	<p>60 cm<sup>2</sup> 60 सेमी<sup>2</sup></p>
	<p>66 cm<sup>2</sup> 66 सेमी<sup>2</sup></p>
	<p>72 cm<sup>2</sup> 72 सेमी<sup>2</sup></p>
	<p>80 cm<sup>2</sup> 80 सेमी<sup>2</sup></p>

Not Answered

[Click Here to Challenge Question No.: 124](#)

Q.No: 124	<p>A trapezium (bases 8 cm &amp; 12 cm, height 6 cm) is attached to a rectangle (8 cm × 10 cm) to form a wood panel. What is the total area?</p> <p>एक समलम्ब चतुर्भुज (आधार 8 सेमी और 12 सेमी, ऊँचाई 6 सेमी) को एक आयत (8 सेमी × 10 सेमी) से जोड़कर लकड़ी का पैनल बनाया गया है। इसका कुल क्षेत्रफल कितना है?</p>
	<p>96 cm<sup>2</sup> 96 सेमी<sup>2</sup></p>
	<p>108 cm<sup>2</sup> 108 सेमी<sup>2</sup></p>
	<p>120 cm<sup>2</sup></p>

120 सेमी<sup>2</sup><https://sscstudy.com/>140 cm<sup>2</sup>140 सेमी<sup>2</sup>

Not Answered

[Click Here to Challenge Question No.: 125](#)

Q.No: 125 A square field has an area of 400 m<sup>2</sup>. If each side increases by 25%, what is the new area?  
 एक वर्गाकार मैदान का क्षेत्रफल 400 वर्ग मीटर है। यदि प्रत्येक भुजा में 25% की वृद्धि कर दी जाए, तो नया क्षेत्रफल क्या होगा?

625 m<sup>2</sup>625 मीटर<sup>2</sup>600 m<sup>2</sup>600 मीटर<sup>2</sup>700 m<sup>2</sup>700 मीटर<sup>2</sup>500 m<sup>2</sup>500 मीटर<sup>2</sup>[Click Here to Challenge Question No.: 126](#)

Q.No: 126 The difference between the square of a number and the square of its half is 432. What is the number?  
 किसी संख्या के वर्ग और उसके आधे के वर्ग का अंतर 432 है। वह संख्या क्या है?

18

18

24

24

36

36

48

48

[Click Here to Challenge Question No.: 127](#)

Q.No: 127 A student scored marks in 5 subjects: 72, 68, 74, 70, and one unknown subject. If his average is 71, what is the missing mark?  
 एक छात्र ने 5 विषयों में क्रमशः 72, 68, 74, 70 और एक अज्ञात विषय में अंक प्राप्त किए। अगर उसका औसत 71 है, तो लुप्त अंक क्या है?

70

70

72

72

71

71

69

69

<https://sscstudy.com/>



Q.No: 128	What is the slope in the equation $y=4x-2$ ? समीकरण $y=4x-2$ में ढलान क्या है?
	0
	0
	1
	1
	4
	4
	2
	2

Q.No: 129	If the equation of a line is $3x - 5y = 15$ , what is the equation of the line perpendicular to it that passes through the point $(3, 2)$ ? अगर किसी रेखा का समीकरण $3x - 5y = 15$ है, तो उस रेखा के लंबवत रेखा का समीकरण क्या है जो बिंदु $(3, 2)$ से होकर गुजरती है?
	$y=(5/3)x+7$ $y=(5/3)x+7$
	$y=-(5/3)x+7$ $y=-(5/3)x+7$
	$y=(5/3)x-7$ $y=(5/3)x-7$
	$y=(-3/5)x+7$ $y=(-3/5)x+7$

Not Answered

Q.No: 130	If one angle is $15^\circ$ less than twice its complement, find the angle. अगर एक कोण अपने पूरक कोण के दोगुने से $15^\circ$ कम है, तो कोण ज्ञात कीजिए।
	$25^\circ$ $25^\circ$
	$30^\circ$ $30^\circ$
	$55^\circ$ $55^\circ$
	$40^\circ$ $40^\circ$

Q.No: 131	The angle of elevation of a tower from a point 120 m away is $45^\circ$ . Find the height of the tower. 120 मीटर दूर स्थित एक बिंदु से एक मीनार का उन्नयन कोण $45^\circ$ है। मीनार की ऊँचाई ज्ञात कीजिए।
	100 m 100 मीटर

	150 m 150 मीटर
	120 m 120 मीटर
	10 10 मीटर

[Click Here to Challenge Question No.: 132](#)

Q.No: 132	The complement of an angle is one-fourth the angle. Find the angle किसी कोण का पूरक कोण उस कोण का एक-चौथाई होता है। कोण ज्ञात कीजिए
	72° 72°
	7° 7°
	42° 42°
	87° 87°

[Click Here to Challenge Question No.: 133](#)

Q.No: 133	From a point 20 m above ground level on a vertical tower, the angle of depression of a point on the ground is $30^\circ$ . Find the distance from the base of the tower to that point. एक ऊर्ध्वाधर मीनार पर भूमि तल से 20 मीटर ऊपर स्थित एक बिंदु से, भूमि पर स्थित एक बिंदु का अवनमन कोण $30^\circ$ है। मीनार के आधार से उस बिंदु की दूरी ज्ञात कीजिए।
	10 m 10 मीटर
	34.64m 34.64 मीटर
	110 m 110 मीटर
	90 m 90 मीटर

[Click Here to Challenge Question No.: 134](#)

Q.No: 134	A cylinder is inscribed inside a cube of side 10 cm. What percentage of the cube's volume is occupied by the cylinder? 10 सेमी भुजा वाले एक घन के अंदर एक बेलन अंकित है। घन के आयतन का कितना प्रतिशत भाग बेलन द्वारा घेरा गया है?
	78.5% 78.5%
	60.5% 60.5%
	50% 50%
	90.5% 90.5%

[Click Here to Challenge Question No.: 135](#)

Q.No: 135	Consider a jar formed by a cylinder and a hemispherical lid, both having the same radius 'r'. If the cylinder's height is also 'r', what is the ratio of the hemisphere's volume to the total volume of the jar?  एक बेलन और एक अर्धगोलाकार ढक्कन से बने एक जार पर विचार करें, दोनों की त्रिज्या 'r' समान है। यदि बेलन की ऊँचाई भी 'r' है, तो अर्धगोलाकार के आयतन और जार के कुल आयतन का अनुपात क्या है?
	1:6
	1:6
	1:3
	1:3
	1:4
	1:4
	2:5
	2:5

[Click Here to Challenge Question No.: 136](#)

Q.No: 136	The base of a right prism is an equilateral triangle with each side measuring 8 cm. Given that the height of the prism is 10 cm, what is its volume?  एक समकोण प्रिज्म का आधार एक समबाहु त्रिभुज है जिसकी प्रत्येक भुजा 8 सेमी है। दिया गया है कि प्रिज्म की ऊँचाई 10 सेमी है, तो इसका आयतन क्या है?
	$320\sqrt{3} \text{ cm}^3$
	$320\sqrt{3} \text{ cm}^3$
	$676.6 \text{ cm}^3$
	$676.6 \text{ cm}^3$
	$240 \text{ cm}^3$
	$240 \text{ cm}^3$
	$160\sqrt{3} \text{ cm}^3$
	$160\sqrt{3} \text{ cm}^3$

[Click Here to Challenge Question No.: 137](#)

Q.No: 137	A glass trough is in the shape of a right prism with trapezium base (parallel sides 10 cm & 6 cm, height = 4 cm). If prism height = 20 cm, find volume.  एक काँच का बर्तन एक समलम्ब प्रिज्म के आकार की है जिसका आधार समलम्ब चतुर्भुज है (समानांतर भुजाएँ 10 सेमी और 6 सेमी, ऊँचाई = 4 सेमी)। यदि प्रिज्म की ऊँचाई = 20 सेमी, तो आयतन ज्ञात कीजिए।
	$660 \text{ cm}^3$
	660 सेमी <sup>3</sup>
	$540 \text{ cm}^3$
	540 सेमी <sup>3</sup>
	$550 \text{ cm}^3$
	550 सेमी <sup>3</sup>
	$640 \text{ cm}^3$
	640 सेमी <sup>3</sup>

Not Answered

[Click Here to Challenge Question No.: 138](#)

Q.No: 138	If the circumradius of a triangle is 7 cm, what is the distance from the circumcenter to a vertex? अगर किसी त्रिभुज की परित्रिज्या 7 सेमी है, तो परिकेंद्र से शीर्ष तक की दूरी क्या है?	<a href="https://sscstudy.com/">https://sscstudy.com/</a>
	5 cm 5 सेमी	
	7 cm 7 सेमी	
	3.5 cm 3.5 सेमी	
	14 cm 14 सेमी	

[Click Here to Challenge Question No.: 139](#)

Q.No: 139	Given a hollow hemisphere with an inner radius of 7 cm and an outer radius of 8 cm, what is its entire surface area? एक खोखला अर्धगोला दिया गया है जिसकी आंतरिक त्रिज्या 7 सेंटीमीटर तथा बाहरी त्रिज्या 8 सेंटीमीटर है, इसका सम्पूर्ण पृष्ठीय क्षेत्रफल क्या है?
	$248\pi \text{ cm}^2$ 248 $\pi$ वर्ग सेंटीमीटर
	$441\pi \text{ cm}^2$ 441 $\pi$ वर्ग सेंटीमीटर
	$231\pi \text{ cm}^2$ 231 $\pi$ वर्ग सेंटीमीटर
	$241\pi \text{ cm}^2$ 241 $\pi$ वर्ग सेंटीमीटर

Not Answered

[Click Here to Challenge Question No.: 140](#)

Q.No: 140	A cone has a base diameter of 70 cm and a height of 12 cm. Calculate its volume. एक शंकु का आधार व्यास 70 सेंटीमीटर और ऊँचाई 12 सेंटीमीटर है। इसका आयतन ज्ञात कीजिए।
	$15800 \text{ cm}^3$ 15800 घन सेंटीमीटर
	$15400 \text{ cm}^3$ 15400 घन सेंटीमीटर
	$16800 \text{ cm}^3$ 16800 घन सेंटीमीटर
	$14800 \text{ cm}^3$ 14800 घन सेंटीमीटर

Not Answered

[Click Here to Challenge Question No.: 141](#)

<https://sscstudy.com/>

Q.No: 141	The x-intercept of the line $6x - 2y = 10$ is: रेखा $6x - 2y = 10$ का x- इंटरसेप्ट है:	<a href="https://sscstudy.com/">https://sscstudy.com/</a>
	5/3 5/3	
	3/5 3/5	
	-1/2 -1/2	
	-2/3 -2/3	

<a href="#">Click Here to Challenge Question No.: 142</a>		
Q.No: 142	If $\cot A = 1$ , find the value of $\sin^2 A - \cos^2 A$ . यदि $\cot A = 1$ , तो $\sin^2 A - \cos^2 A$ का मान ज्ञात कीजिए।	
	0 0	
	1 1	
	2 2	
	3 3	

<a href="#">Click Here to Challenge Question No.: 143</a>		
Q.No: 143	If $\tan^2 \theta + \cot^2 \theta = 50$ , then find $\sec^4 \theta + \operatorname{cosec}^4 \theta$ . यदि $\tan^2 \theta + \cot^2 \theta = 50$ हो, तो $\sec^4 \theta + \operatorname{cosec}^4 \theta$ ज्ञात कीजिए।	
	2600 2600	
	2800 2800	
	3200 3200	
	3000 3000	

<a href="#">Click Here to Challenge Question No.: 144</a>		
Q.No: 144	Find the coordinates of the centroid for a triangle with vertices located at the points (2, 1), (5, 4), and (8, 1). बिंदु (2, 1), (5, 4) और (8, 1) पर स्थित शीर्षों वाले त्रिभुज के केन्द्रक के निर्देशांक ज्ञात कीजिए।	
	(5, 2) (5, 2)	
	(6, 2) (6, 2)	
	(5, 3)	

(5, 3)

<https://sscstudy.com/>

(6, 3)

(6, 3)

[Click Here to Challenge Question No.: 145](#)

Q.No: 145 In  $\triangle ABC$ ,  $\angle A = 90^\circ$  AD is the altitude to BC. If  $AB = 15$  cm and  $AC = 20$  cm, what is the length of AD?

$\triangle ABC$  में,  $\angle A = 90^\circ$  AD, BC पर शीर्षलंब है। यदि  $AB = 15$  सेमी और  $AC = 20$  सेमी है, तो AD की लंबाई क्या है?

9 cm

9 सेमी

12 cm

12 सेमी

15 cm

15 सेमी

25 cm

25 सेमी

[Click Here to Challenge Question No.: 146](#)

Q.No: 146 Simplify:  
 $72 + \sqrt{32} - \sqrt{18}$

सरल करें:  
 $72 + \sqrt{32} - \sqrt{18}$

$72 + \sqrt{2}$

$72 + \sqrt{2}$

$63 + \sqrt{2}$

$63 + \sqrt{2}$

$51 + \sqrt{5}$

$51 + \sqrt{5}$

$47 + \sqrt{9}$

$47 + \sqrt{9}$

[Click Here to Challenge Question No.: 147](#)

Q.No: 147 In a circle, chords AB and AC are equal in length. If chord AB subtends an angle of  $50^\circ$  at the center, what is the angle subtended by chord AC at the center?

एक वृत्त में, जीवा AB और AC की लंबाई बराबर है। यदि जीवा AB केंद्र पर  $50^\circ$  का कोण बनाती है, तो जीवा AC द्वारा केंद्र पर बनाया गया कोण कितना होगा?

$50^\circ$

$50^\circ$

$100^\circ$

$100^\circ$

$25^\circ$

$25^\circ$

$130^\circ$

$130^\circ$

<https://sscstudy.com/>

[Click Here to Challenge Question No.: 148](#)

Q.No: 148	<p>In a circle, two tangents PA and PB are drawn from an external point P. If the angle between the tangents <math>\angle APB = 120^\circ</math>, if the radius is 10 cm, what is the length of the segment OP? (use <math>\sqrt{3} = 1.732</math>)</p> <p>एक वृत्त में, बाह्य बिंदु P से दो स्पर्श रेखाएँ PA और PB खींची गई हैं। यदि स्पर्श रेखाओं <math>\angle APB</math> के बीच का कोण <math>120^\circ</math> है, यदि त्रिज्या 10 सेमी है, तो रेखाखंड OP की लंबाई क्या है? (प्रयोग करें <math>\sqrt{3} = 1.732</math>)</p>
	<p><math>10\sqrt{2} \text{ cm}</math></p> <p><math>10\sqrt{2}</math> सेमी</p>
	<p>10.2 cm</p> <p>10.2 सेमी</p>
	<p><math>10\sqrt{3} \text{ cm}</math></p> <p><math>10\sqrt{3}</math> सेमी</p>
	<p>11.5 cm</p> <p>11.5 सेमी</p>

[Click Here to Challenge Question No.: 149](#)

Q.No: 149	<p>Ravi borrowed \$5,000 from a bank at an interest rate of 6% per annum for 4 years. Calculate the simple interest and the total amount he has to repay after 4 years.</p> <p>रवि ने एक बैंक से 6% वार्षिक ब्याज दर पर 4 वर्षों के लिए 5,000 डॉलर उधार लिए। साधारण ब्याज और 4 वर्षों के बाद उसे चुकानी वाली कुल राशि की गणना कीजिए।</p>
	<p>SI = \$1,000; Total = \$6,000</p> <p>सरल ब्याज = \$1,000; कुल = \$6,000</p>
	<p>SI = \$1,200; Total = \$6,200</p> <p>सरल ब्याज = \$1,200; कुल = \$6,200</p>
	<p>SI = \$1,400; Total = \$6,400</p> <p>सरल ब्याज = \$1,400; कुल = \$6,400</p>
	<p>SI = \$1,500; Total = \$6,500</p> <p>सरल ब्याज = \$1,500; कुल = \$6,500</p>

[Click Here to Challenge Question No.: 150](#)

Q.No: 150	<p>A, B, and C together can complete a task in 10 days. A alone takes 20 days, and B alone takes 30 days. How long will C alone take?</p> <p>A, B और C मिलकर एक काम 10 दिनों में पूरा कर सकते हैं। A अकेले 20 दिन लेता है, और B अकेले 30 दिन लेता है। C अकेले कितना समय लेगा?</p>
	<p>40 days</p> <p>40 दिन</p>
	<p>45 days</p> <p>45 दिन</p>
	<p>50 days</p> <p>50 दिन</p>
	<p>60 days</p> <p>60 दिन</p>





## CANDIDATE RESPONSE SHEET/GRIEVANCE SYSTEM

[View Your Responses](#)[Click Here to View Grievance Questions](#)Admin logged in. [ [Logout](#) ]

Roll No.

Exam Level

: 

Test Date

: 11 Dec 2025

Test Time and Shift

: 01:30 PM (Shift-2)

Correct Option selected Wrong Option selected Correct Option Not Answered[Save / Print](#)**Undertaking by the candidate :**

I acknowledge that this saved question paper is for my personal use and self-analysis only. I understand that sharing, distributing, or using it for commercial or any other purposes is strictly prohibited and may lead to legal action as per applicable acts, rules and regulations.

**Note:**

The candidates may note that in the challenge module the sequence of the questions and the options may be different from how it appeared during the examination. This is because in the challenge module the sequence of the questions as well as the answers will be the same for all the candidates who appeared in a particular shift while during the actual examination these sequences were different for different candidates. However the answer key selected by the candidates during the examination will exactly be reflected in the challenge module.

[Click Here for PART-A](#)[Click Here for PART-B](#)[Click Here for PART-C](#)[Click Here for PART-D](#)**PART-D (English Comprehension)**[Click Here to Challenge Question No.: 151](#)

Q.No: 151	<p>In the following question, a sentence with a blank is given, followed by five words labeled (1), (2), (3), (4), and (5). Choose the word that fills the blank appropriately in the context of the passage.</p> <p>The invention of the printing press in the 15th century (1) ____, heralding a seismic transformation in the dissemination of knowledge across Europe and beyond. Initially, the technology (2) ____ largely to religious texts, yet within decades, its reach encompassed scientific treatises, political pamphlets, and literary works. The printing press not only democratized access to information but also catalyzed movements such as the Reformation and the Enlightenment, creating (3)palpable shifts in societal structures.</p> <p>As books became more affordable and literacy rates rose, ideas could traverse borders with unprecedented speed, challenging established authorities and inspiring intellectual revolutions. What had once been the domain of the few now became a vibrant public discourse, reshaping collective consciousness.</p> <p>However, the rise of printed material also (4) engendered anxieties among elites, who feared the erosion of traditional hierarchies. Even today, as digital media dominates, the legacy of the printing press (5) ____, underlining the enduring significance of mass communication technologies.</p> <p>Which tense/form fits best?(1)</p>
	was marked
	marks
	was marking



[Click Here to Challenge Question No.: 152](#)

Q.No: 152 In the following question, a sentence with a blank is given, followed by five words labeled (1), (2), (3), (4), and (5). Choose the word that fills the blank appropriately in the context of the passage.

The invention of the printing press in the 15th century (1) \_\_\_\_\_, heralding a seismic transformation in the dissemination of knowledge across Europe and beyond. Initially, the technology (2) \_\_\_\_\_ largely to religious texts, yet within decades, its reach encompassed scientific treatises, political pamphlets, and literary works. The printing press not only democratized access to information but also catalyzed movements such as the Reformation and the Enlightenment, creating (3) **palpable** shifts in societal structures.

As books became more affordable and literacy rates rose, ideas could traverse borders with unprecedented speed, challenging established authorities and inspiring intellectual revolutions. What had once been the domain of the few now became a vibrant public discourse, reshaping collective consciousness.

However, the rise of printed material also (4) **engendered** anxieties among elites, who feared the erosion of traditional hierarchies. Even today, as digital media dominates, the legacy of the printing press (5) \_\_\_\_\_, underlining the enduring significance of mass communication technologies.

Choose the correct voice/tense carefully: (2)

☐ limited

☐ had limited

☒ was limited

☐ limits

[Click Here to Challenge Question No.: 153](#)

Q.No: 153 In the following question, a sentence with a blank is given, followed by five words labeled (1), (2), (3), (4), and (5). Choose the word that fills the blank appropriately in the context of the passage.

The invention of the printing press in the 15th century (1) \_\_\_\_\_, heralding a seismic transformation in the dissemination of knowledge across Europe and beyond. Initially, the technology (2) \_\_\_\_\_ largely to religious texts, yet within decades, its reach encompassed scientific treatises, political pamphlets, and literary works. The printing press not only democratized access to information but also catalyzed movements such as the Reformation and the Enlightenment, creating (3) **palpable** shifts in societal structures.

As books became more affordable and literacy rates rose, ideas could traverse borders with unprecedented speed, challenging established authorities and inspiring intellectual revolutions. What had once been the domain of the few now became a vibrant public discourse, reshaping collective consciousness.

However, the rise of printed material also (4) **engendered** anxieties among elites, who feared the erosion of traditional hierarchies. Even today, as digital media dominates, the legacy of the printing press (5) \_\_\_\_\_, underlining the enduring significance of mass communication technologies.

In this context, 'palpable' most nearly means: (3)

☐ Invisible

☒ Tangible

☐ Theoretical

☐ Diminishing

Q.No: 154 In the following question, a sentence with a blank is given, followed by five words labeled (1), (2), (3), (4), and (5). Choose the word that fills the blank appropriately in the context of the passage.

The invention of the printing press in the 15th century (1) \_\_\_\_\_, heralding a seismic transformation in the dissemination of knowledge across Europe and beyond. Initially, the technology (2) \_\_\_\_\_ largely to religious texts, yet within decades, its reach encompassed scientific treatises, political pamphlets, and literary works. The printing press not only democratized access to information but also catalyzed movements such as the Reformation and the Enlightenment, creating (3) **palpable** shifts in societal structures.

As books became more affordable and literacy rates rose, ideas could traverse borders with unprecedented speed, challenging established authorities and inspiring intellectual revolutions. What had once been the domain of the few now became a vibrant public discourse, reshaping collective consciousness.

However, the rise of printed material also (4) **engendered** anxieties among elites, who feared the erosion of traditional hierarchies. Even today, as digital media dominates, the legacy of the printing press (5) \_\_\_\_\_, underlining the enduring significance of mass communication technologies.

What does 'engendered' most nearly mean here? (4)

Eradicated

Concealed

Generated

Challenged

Q.No: 155 In the following question, a sentence with a blank is given, followed by five words labeled (1), (2), (3), (4), and (5). Choose the word that fills the blank appropriately in the context of the passage.

The invention of the printing press in the 15th century (1) \_\_\_\_\_, heralding a seismic transformation in the dissemination of knowledge across Europe and beyond. Initially, the technology (2) \_\_\_\_\_ largely to religious texts, yet within decades, its reach encompassed scientific treatises, political pamphlets, and literary works. The printing press not only democratized access to information but also catalyzed movements such as the Reformation and the Enlightenment, creating (3) **palpable** shifts in societal structures.

As books became more affordable and literacy rates rose, ideas could traverse borders with unprecedented speed, challenging established authorities and inspiring intellectual revolutions. What had once been the domain of the few now became a vibrant public discourse, reshaping collective consciousness.

However, the rise of printed material also (4) **engendered** anxieties among elites, who feared the erosion of traditional hierarchies. Even today, as digital media dominates, the legacy of the printing press (5) \_\_\_\_\_, underlining the enduring significance of mass communication technologies.

Which tense/modal suits the idea of continuous influence best? (5)

endures

endured

has endured

had endured

Q.No: 156	Choose the correct one-word substitution for the blank in the sentence below. Despite being wealthy, Rohan couldn't resist stealing small items from stores, suggesting he might be a _____. <a href="https://sscstudy.com/">https://sscstudy.com/</a>
	philanthropist
	kleptomaniac
	pessimist
	hypochondriac

[Click Here to Challenge Question No.: 157](#)

Q.No: 157	<p><b>Which of the following options, rearrange the given sentences in a proper sequence to make a meaningful passage?</b></p> <ol style="list-style-type: none"> <li>1. The empire's economy also suffered as the Ottomans lost control over key trade routes, particularly with the rise of maritime trade routes controlled by European powers.</li> <li>2. In the 19th century, the rise of nationalism within the empire's diverse ethnic groups - Greeks, Serbs, Armenians, Arabs, and others - further weakened Ottoman control.</li> <li>3. The sultans also grew less powerful as the elite bureaucracy became more entrenched, and factionalism within the ruling class created further instability.</li> <li>4. One of the key factors in the decline of the Ottoman Empire was the weakening of its military forces due to the failure in keeping up with the European military advancements.</li> <li>5. The final blow came with its involvement in World War I as the Ottomans sided with the Central Powers who were badly defeated by the Allies.</li> </ol>
	2-1-3-4-5
	5-4-2-3-1
	3-2-1-4-5
	4-1-3-2-5

[Click Here to Challenge Question No.: 158](#)

Q.No: 158	<p>Improve the sentence using the correct phrasal verb of the underlined word.</p> <p>You must not <u>fall out</u> your parents, no matter how angry you are.</p>
	fall for
	fall on
	fall out with
	fall off

Q.No: 159	Identify the error in the sentence.  The manager motivated his team with a strong believe in their potential.
	team
	believe
	potential
	strong

Q.No: 160	What does the idiom "blow one's own horn" mean?
	To praise oneself excessively
	To play a musical instrument
	To help others in need
	To remain silent in a conversation

Q.No: 161	<p>Which of the given options arranges the following sentences in the most logical sequence to form a meaningful paragraph?</p> <div><p>1. James Watson and Francis Crick, building on Rosalind Franklin's X-ray diffraction images, proposed the model in 1953.</p><p>2. Understanding DNA's structure has led to developments in medicine, forensic science, and evolutionary research.</p><p>3. Their findings demonstrated how DNA stores genetic information through base pairing.</p><p>4. This discovery revolutionized biology, paving the way for advances in genetic engineering and biotechnology.</p><p>5. The discovery of DNA's double-helix structure was a major breakthrough in genetics.</p></div>
	5-1-3-4-2
	2-4-3-1-5
	3-1-4-2-5
	1-2-4-3-5

Q.No: 162	Fill in the blank with the correctly spelt word.  The DNA strands were separated through _____ methods.
	electrophoresis

	electrophoresis	<a href="https://sscstudy.com/">https://sscstudy.com/</a>
	electrophorresis	
	electrophoreses	

<a href="#">Click Here to Challenge Question No.: 163</a>		
Q.No: 163	Select the most appropriate synonym of the given word: <b>EGREGIOUS</b>	
	Minor	
	Trivial	
	Unnoticed	
	Shocking	

<a href="#">Click Here to Challenge Question No.: 164</a>		
Q.No: 164	Select the most appropriate synonym of the given word: <b>GREGARIOUS</b>	
	Quiet	
	Sociable	
	Shy	
	Reserved	

<a href="#">Click Here to Challenge Question No.: 165</a>		
Q.No: 165	Select the most appropriate antonym of the given word. <b>Candid</b>	
	Frank	
	Guarded	
	Honest	
	Open	

<a href="#">Click Here to Challenge Question No.: 166</a>		
Q.No: 166	Select the most appropriate antonym of the given word. <b>Accentuate</b>	
	Emphasize	
	Highlight	
	Obscure	
	Promote	



[Click Here to Challenge Question No.: 167](#)Q.No: 167 Select the most appropriate synonym of the given word: **LACONIC**☒ Concise☐ Wordy☐ Talkative☐ Verbose[Click Here to Challenge Question No.: 168](#)Q.No: 168 Select the most appropriate synonym of the given word: **MAGNANIMOUS**☐ Mean☒ Generous☐ Covetous☐ Petty[Click Here to Challenge Question No.: 169](#)Q.No: 169 Select the most appropriate antonym of the given word. **Cursory**☒ Thorough☐ Brief☐ Hasty☐ Superficial[Click Here to Challenge Question No.: 170](#)Q.No: 170 Select the most appropriate antonym of the given word. **Maladroit**☐ Clumsy☐ Awkward☒ Skillful☐ Inept[Click Here to Challenge Question No.: 171](#)

Q.No: 171	Choose the correct meaning of idiom: <b>To send someone to Coventry</b>	<a href="https://sscstudy.com/">https://sscstudy.com/</a>
	To award someone symbolic punishment	
	To exile someone to a faraway place	
	To ignore someone deliberately	
	To mock someone publicly	

[Click Here to Challenge Question No.: 172](#)

Q.No: 172	Choose the correct meaning of idiom: <b>Hornet's nest</b>	
	A confusing situation	
	A source of controversy and trouble	
	A peaceful debate	
	A place of retreat	

[Click Here to Challenge Question No.: 173](#)

Q.No: 173	Spot the <b>correct spelling</b> of a term meaning 'reasoning method'.	
	Logic	
	Logik	
	Logick	
	Logiq	

[Click Here to Challenge Question No.: 174](#)

Q.No: 174	Spot the <b>correct spelling</b> of a term meaning 'theory of knowledge'.	
	Epistemology	
	Epistomology	
	Eppistemology	
	Epistemollogy	

[Click Here to Challenge Question No.: 175](#)

Q.No: 175	Find the <b>correctly spelled</b> word referring to one who hates mankind.	
-----------	--	--

	Misonthropy
	Mizanthrope
	Misanthrop
	Misanthrope

[Click Here to Challenge Question No.: 176](#)

Q.No: 176	Choose the correct <b>one-word substitute</b> for: 'A person who supports or is involved in the arts'.
	Philatelist
	Philanthropist
	Aesthete
	Curator

[Click Here to Challenge Question No.: 177](#)

Q.No: 177	Spot the <b>correct spelling</b> of the study of butterflies & moths.
	Lepidopetrology
	Lepidopterology
	Lepidopteralogy
	Lepidopterlogy

[Click Here to Challenge Question No.: 178](#)

Q.No: 178	Choose the correct <b>one-word substitute</b> for: 'A state of temporary disuse or suspension.'
	Abeyance
	Lull
	Dormancy
	Stasis

[Click Here to Challenge Question No.: 179](#)



Q.No: 179	<p><b>In the given passage, some words have been deleted. Read the passage intently and choose the most appropriate option to fill in each blank:</b></p> <p>Somewhere between the glint of touchscreen interfaces and the blur of algorithmic suggestion lies a silent erosion of pause. The modern subject, once presumed to be an agent of reflection, increasingly becomes a vessel for speed—tethered not to thought, but to reflex. What is offered as efficiency often exacts a toll in deliberation. Every frictionless swipe and curated feed removes the texture of decision, substituting it with a stream of optimized compulsions. The interface smiles, but never waits. In this schema, slowness becomes suspect, and interruption is an error to be patched. As platforms preempt intent, they also unmake it: the user acts, but only within corridors already anticipated. In such a world, the idea of freedom becomes <b>(1)</b> _____, not in absence, but in excess—drowned in choice yet starved of consequence. If autonomy is to mean more than responsive motion, we must recover the grammar of refusal. The act of pausing, once mundane, is now almost <b>(2)</b> _____, a resistance against the coercive design of continuity. Regulation, in this context, is not merely about protection; it is about preserving <b>(3)</b> _____ in a system that privileges momentum over mindfulness. We do not need more personalization—we need more interruption. Only by interrupting the velocity of interface can we hope to return to the interiority that once defined being. In this landscape, the measure of health is not how swiftly we act, but how often we are willing to <b>(4)</b> _____ acting. And perhaps, how fiercely we defend the strange dignity of being <b>(5)</b> _____.</p> <p>What should come in the place of blank number <b>(1)</b>?</p>
	absolute
	performative
	illusory
	reductive

[Click Here to Challenge Question No.: 180](#)

Q.No: 180	<p><b>In the given passage, some words have been deleted. Read the passage intently and choose the most appropriate option to fill in each blank:</b></p> <p>Somewhere between the glint of touchscreen interfaces and the blur of algorithmic suggestion lies a silent erosion of pause. The modern subject, once presumed to be an agent of reflection, increasingly becomes a vessel for speed—tethered not to thought, but to reflex. What is offered as efficiency often exacts a toll in deliberation. Every frictionless swipe and curated feed removes the texture of decision, substituting it with a stream of optimized compulsions. The interface smiles, but never waits. In this schema, slowness becomes suspect, and interruption is an error to be patched. As platforms preempt intent, they also unmake it: the user acts, but only within corridors already anticipated. In such a world, the idea of freedom becomes <b>(1)</b> _____, not in absence, but in excess—drowned in choice yet starved of consequence. If autonomy is to mean more than responsive motion, we must recover the grammar of refusal. The act of pausing, once mundane, is now almost <b>(2)</b> _____, a resistance against the coercive design of continuity. Regulation, in this context, is not merely about protection; it is about preserving <b>(3)</b> _____ in a system that privileges momentum over mindfulness. We do not need more personalization—we need more interruption. Only by interrupting the velocity of interface can we hope to return to the interiority that once defined being. In this landscape, the measure of health is not how swiftly we act, but how often we are willing to <b>(4)</b> _____ acting. And perhaps, how fiercely we defend the strange dignity of being <b>(5)</b> _____.</p> <p>What should come in the place of blank number <b>(2)</b>?</p>
	revolutionary
	trivial
	automated
	random

[Click Here to Challenge Question No.: 181](#)

Q.No: 181

**In the given passage, some words have been deleted. Read the passage intently and choose the most appropriate option to fill in each blank:**

Somewhere between the glint of touchscreen interfaces and the blur of algorithmic suggestion lies a silent erosion of pause. The modern subject, once presumed to be an agent of reflection, increasingly becomes a vessel for speed—tethered not to thought, but to reflex. What is offered as efficiency often exacts a toll in deliberation. Every frictionless swipe and curated feed removes the texture of decision, substituting it with a stream of optimized compulsions. The interface smiles, but never waits. In this schema, slowness becomes suspect, and interruption is an error to be patched. As platforms preempt intent, they also unmake it: the user acts, but only within corridors already anticipated. In such a world, the idea of freedom becomes **(1)** \_\_\_\_\_, not in absence, but in excess—drowned in choice yet starved of consequence. If autonomy is to mean more than responsive motion, we must recover the grammar of refusal. The act of pausing, once mundane, is now almost **(2)** \_\_\_\_\_, a resistance against the coercive design of continuity. Regulation, in this context, is not merely about protection; it is about preserving **(3)** \_\_\_\_\_ in a system that privileges momentum over mindfulness. We do not need more personalization—we need more interruption. Only by interrupting the velocity of interface can we hope to return to the interiority that once defined being. In this landscape, the measure of health is not how swiftly we act, but how often we are willing to **(4)** \_\_\_\_\_ acting. And perhaps, how fiercely we defend the strange dignity of being **(5)** \_\_\_\_\_.

What should come in the place of blank number **(3)**?

☒ friction☒ data☐ feedback☐ bandwidth[Click Here to Challenge Question No.: 182](#)

Q.No: 182

**In the given passage, some words have been deleted. Read the passage intently and choose the most appropriate option to fill in each blank:**

Somewhere between the glint of touchscreen interfaces and the blur of algorithmic suggestion lies a silent erosion of pause. The modern subject, once presumed to be an agent of reflection, increasingly becomes a vessel for speed—tethered not to thought, but to reflex. What is offered as efficiency often exacts a toll in deliberation. Every frictionless swipe and curated feed removes the texture of decision, substituting it with a stream of optimized compulsions. The interface smiles, but never waits. In this schema, slowness becomes suspect, and interruption is an error to be patched. As platforms preempt intent, they also unmake it: the user acts, but only within corridors already anticipated. In such a world, the idea of freedom becomes **(1)** \_\_\_\_\_, not in absence, but in excess—drowned in choice yet starved of consequence. If autonomy is to mean more than responsive motion, we must recover the grammar of refusal. The act of pausing, once mundane, is now almost **(2)** \_\_\_\_\_, a resistance against the coercive design of continuity. Regulation, in this context, is not merely about protection; it is about preserving **(3)** \_\_\_\_\_ in a system that privileges momentum over mindfulness. We do not need more personalization—we need more interruption. Only by interrupting the velocity of interface can we hope to return to the interiority that once defined being. In this landscape, the measure of health is not how swiftly we act, but how often we are willing to **(4)** \_\_\_\_\_ acting. And perhaps, how fiercely we defend the strange dignity of being **(5)** \_\_\_\_\_.

What should come in the place of blank number **(4)**?

☐ predict☒ delay☐ measure☒ stop[Click Here to Challenge Question No.: 183](#)

Q.No: 183	<p><b>In the given passage, some words have been deleted. Read the passage intently and choose the most appropriate option to fill in each blank:</b></p> <p>Somewhere between the glint of touchscreen interfaces and the blur of algorithmic suggestion lies a silent erosion of pause. The modern subject, once presumed to be an agent of reflection, increasingly becomes a vessel for speed—tethered not to thought, but to reflex. What is offered as efficiency often exacts a toll in deliberation. Every frictionless swipe and curated feed removes the texture of decision, substituting it with a stream of optimized compulsions. The interface smiles, but never waits. In this schema, slowness becomes suspect, and interruption is an error to be patched. As platforms preempt intent, they also unmake it: the user acts, but only within corridors already anticipated. In such a world, the idea of freedom becomes <b>(1)</b> _____, not in absence, but in excess—drowned in choice yet starved of consequence. If autonomy is to mean more than responsive motion, we must recover the grammar of refusal. The act of pausing, once mundane, is now almost <b>(2)</b> _____, a resistance against the coercive design of continuity. Regulation, in this context, is not merely about protection; it is about preserving <b>(3)</b> _____ in a system that privileges momentum over mindfulness. We do not need more personalization—we need more interruption. Only by interrupting the velocity of interface can we hope to return to the interiority that once defined being. In this landscape, the measure of health is not how swiftly we act, but how often we are willing to <b>(4)</b> _____ acting. And perhaps, how fiercely we defend the strange dignity of being <b>(5)</b> _____.</p> <p>What should come in the place of blank number <b>(5)</b>?</p>
	interrupted
	efficient
	entertained
	indifferent

[Click Here to Challenge Question No.: 184](#)

Q.No: 184	<p><b>Fill in the blank:</b></p> <p>Had I known the conference was postponed, I _____ my flight reservations.</p>
	would cancel
	would have canceled
	will have canceled
	had canceled

[Click Here to Challenge Question No.: 185](#)

Q.No: 185	<p><b>Select the correct option:</b></p> <p>Barely _____ the announcement concluded when inquiries flooded the hotline.</p>
	had
	has
	did
	was

[Click Here to Challenge Question No.: 186](#)

Q.No: 186	<p><b>Find the part of the sentence that contains an error:</b></p> <p>We look forward to meet <b>(1)</b> you at the orientation session <b>(2)</b> scheduled for next Tuesday <b>(3)</b> in the seminar hall. <b>(4)</b></p>
	<b>(1)</b>

(2)

(3)

(4)

[Click Here to Challenge Question No.: 187](#)

Q.No: 187

**Find the part of the sentence that contains an error:**

She speaks more persuasively than she writes, (1)/ which, according to her critics, (2)/ makes her a better orator rather than (3)/ an accomplished communicator. (4)

(1)

(2)

(3)

(4)

[Click Here to Challenge Question No.: 188](#)

Q.No: 188

**Change the following from active to passive:**

Can the algorithm classify the images without supervision?

Can the images being classified by the algorithm without supervision?

Can the images be classified by the algorithm without supervision?

Can the images been classified by the algorithm without supervision?

Can the images have been classified by the algorithm without supervision?

[Click Here to Challenge Question No.: 189](#)

Q.No: 189

**Change the following from active to passive:**

The policy required citizens to link their ID with mobile numbers.

Citizens were required by the policy to link their ID with mobile numbers.

Citizens had to link their ID with mobile numbers.

Linking of ID to mobile numbers was required from citizens.

It was required by the policy to link ID to mobile numbers.

[Click Here to Challenge Question No.: 190](#)

Q.No: 190

**Select the sentence containing the homonym of the highlighted word:**

The sculpture's **patina** conveyed a sense of antiquity.



The vase developed a green patina from oxidation.

Her reputation had the patina of elegance.

The copper roof bore a classic patina.

Patina formed due to prolonged exposure to salt air.

Not Answered

[Click Here to Challenge Question No.: 191](#)

Q.No: 191 **Select the sentence containing the homonym of the highlighted word:**  
The scholar referred to a rare **tract** on Neo-Platonism.

The preacher recited from a tract during his sermon.

The farmer tilled the entire tract before sowing.

The manuscript's tract discussed early Christian mysticism.

The teacher distributed a moral tract to students.

[Click Here to Challenge Question No.: 192](#)

Q.No: 192 **Select the sentence containing the homonym of the highlighted word:**  
The theologian referenced **kenosis** in Christological debates.

The mystic practiced kenosis as spiritual self-emptying.

The sailor recorded kenosis as a form of water purging.

The sermon concluded with a reflection on kenosis.

The tract explored kenosis in Eastern and Western thought.

[Click Here to Challenge Question No.: 193](#)

Q.No: 193 **Convert the sentence provided below from its passive voice structure to an active voice structure:**  
Was the issue being handled by the legal team when the notice arrived?

Did the legal team handle the issue when the notice arrived?

Was the legal team handling the issue when the notice arrived?

Had the legal team handled the issue when the notice arrived?

Does the legal team handle the issue when the notice arrived?

[Click Here to Challenge Question No.: 194](#)

Q.No: 194	Convert the sentence provided below from its passive voice structure to an active voice structure: The offer had not been expected to be withdrawn at the last moment.	<a href="https://sscstudy.com/">https://sscstudy.com/</a>
	Someone had not expected the offer to be withdrawn at the last moment.	
	The withdrawal of the offer was not expected.	
	The offer withdrew itself unexpectedly.	
	Nobody expected that the offer withdrew.	

[Click Here to Challenge Question No.: 195](#)

Q.No: 195	Choose the most suitable option to replace the highlighted part of the sentence: She <i>inspires from her mother's success</i> .
	is inspiring from
	is inspired by her mother's success
	is inspiring by
	inspired with her mother

[Click Here to Challenge Question No.: 196](#)

Q.No: 196	Choose the most suitable option to replace the highlighted part of the sentence: He did nothing <i>but to complain</i> all day.
	but only complained
	but complaining
	but complain
	than complain

[Click Here to Challenge Question No.: 197](#)

Q.No: 197	A sentence is provided in indirect speech. From the four given options, choose the one that most accurately conveys the sentence in its corresponding direct speech. He mused that, were the glacier to retreat another kilometre, the valley ecosystem could irrevocably shift.
	He mused, "If the glacier retreats another kilometre, the valley ecosystem could irrevocably shift."
	He mused, "Were the glacier to retreat another kilometre, the valley ecosystem could irrevocably shift."
	He said, "If glacier retreated another kilometre, ecosystem would shift."
	He mused, "Had the glacier retreated another kilometre, ecosystem could shift."

[Click Here to Challenge Question No.: 198](#)

<https://sscstudy.com/>

Q.No: 198	<b>A sentence is provided in direct speech. From the four given options, choose the one that most accurately conveys the sentence in its corresponding indirect speech.</b> He said, "My brother is sleeping."
	He said his brother is sleeping.
	He said that his brother was sleeping.
	He said that his brother had slept.
	He said his brother has been sleeping.

[Click Here to Challenge Question No.: 199](#)

Q.No: 199	<b>A sentence is provided in indirect speech. From the four given options, choose the one that most accurately conveys the sentence in its corresponding direct speech.</b> The advisor said that if need be, he would intervene personally.
	"If need be, I will intervene personally," said the advisor.
	"If needs be, I shall personally intervene," said the advisor.
	"If needed, I might intervene," said the advisor.
	"If there is need, I would intervene personally," said the advisor.

[Click Here to Challenge Question No.: 200](#)

Q.No: 200	<b>Rearrange the following sentences in correct order to make a logical passage.</b> 1. The final draft is prepared after multiple revisions and feedback sessions. 2. The first draft is developed and shared with the team for input. 3. Feedback is analyzed, and changes are made to improve the draft. 4. The finalized document is shared with the clients for approval.
	2-1-3-4
	1-3-2-4
	3-2-1-4
	2-3-1-4