



## CANDIDATE RESPONSE SHEET/GRIEVANCE SYSTEM

[View Your Responses](#)[Click Here to View Grievance Questions](#)Admin loggedin.[ [Logout](#) ]

Roll No.

Exam Level : 

Test Date : 09 Dec 2025

Test Time and Shift : 03:00 PM (Shift-2)

Correct Option selected Wrong Option selected Correct Option Not Answered[Save / Print](#)[Click Here for PART-A](#)[Click Here for PART-B](#)[Click Here for PART-C](#)[Click Here for PART-D](#)

## PART-A (General Intelligence and Reasoning)

[Click Here to Challenge Question No.: 1](#)

Q.No: 1 Which letter is 7<sup>th</sup> to the left of P in the English alphabet?  
अंग्रेजी वर्णमाला में P के बाईं ओर 7<sup>th</sup> अक्षर कौन सा है?

H  
H

I  
I

K  
K

J  
J

[Click Here to Challenge Question No.: 2](#)

Q.No: 2 Choose the address that is the same as the one given below.  
12/5A, Rajaji Nagar, Bengaluru, Karnataka - 560010

	वह पता चुनें जो नीचे दिए गए पते के समान हो। 12/5A, Rajaji Nagar, Bengaluru, Karnataka - 560010	<a href="https://sscstudy.com/">https://sscstudy.com/</a>
	12/5A, Rajaji Nagar, Bengaluru, Karnataka - 550010 12/5A, Rajaji Nagar, Bengaluru, Karnataka - 550010	
	12/5A, Rajaji Nagar, Bengaluru, Karnataka - 561010 12/5A, Rajaji Nagar, Bengaluru, Karnataka - 561010	
	12/5A, Rajaji Nagar, Bengaluru, Karnataka - 560010 12/5A, Rajaji Nagar, Bengaluru, Karnataka - 560010	
	12/5A, Rajaji Nagar, Bengaluru, Karnataka - 560001 12/5A, Rajaji Nagar, Bengaluru, Karnataka - 560001	

[Click Here to Challenge Question No.: 3](#)

Q.No: 3	<p>Three seminars were conducted in Guwahati, Itanagar, and Shillong on 2<sup>nd</sup>, 3<sup>rd</sup>, and 4<sup>th</sup> April.</p> <ul style="list-style-type: none"> <li>Shillong was scheduled after Guwahati.</li> <li>Itanagar was not on 4<sup>th</sup> April.</li> </ul> <p>When was Shillong's seminar?</p> <p>तीन सेमिनार गुवाहाटी, ईटानगर और शिलांग में 2<sup>nd</sup>, 3<sup>rd</sup>, and 4<sup>th</sup> अप्रैल को आयोजित किए गए।</p> <ul style="list-style-type: none"> <li>शिलांग गुवाहाटी के बाद शेड्यूल किया गया था।</li> <li>ईटानगर 4<sup>th</sup> अप्रैल को नहीं था।</li> </ul> <p>शिलांग का सेमिनार कब था?</p>
	2 <sup>nd</sup> April 2 <sup>nd</sup> अप्रैल
	3 <sup>rd</sup> April 3 <sup>rd</sup> अप्रैल
	4 <sup>th</sup> April 4 <sup>th</sup> अप्रैल
	Cannot be determined तय नहीं किया जा सकता

[Click Here to Challenge Question No.: 4](#)

Q.No: 4	<p>Seminar in Siliguri was 3 days after Darjeeling, and Kalimpong hosted its seminar 1 day before Siliguri. If Darjeeling was on 2<sup>nd</sup> March, when was Kalimpong's seminar?</p> <p>सिलीगुड़ी में सेमिनार दार्जिलिंग के 3 दिन बाद था, और कलिम्पोंग में सेमिनार सिलीगुड़ी से 1 दिन पहले आयोजित किया गया था। अगर दार्जिलिंग 2<sup>nd</sup> मार्च को था, तो कलिम्पोंग का सेमिनार कब था?</p>
	3 <sup>rd</sup> March 3 <sup>rd</sup> मार्च
	4 <sup>th</sup> March 4 <sup>th</sup> मार्च
	5 <sup>th</sup> March 5 <sup>th</sup> मार्च

[Click Here to Challenge Question No.: 5](#)

Q.No: 5 Consider the following statement and choose the option that follows.

Statement: The bank has introduced QR-code-based transactions at all branches.

Inferences:

I. Customers are expected to use digital methods more.

II. Traditional banking counters will be phased out.

निम्नलिखित कथन पर विचार कीजिए और उसके बाद दिए गए विकल्प का चयन कीजिए।

कथन: बैंक ने सभी शाखाओं में क्यूआर-कोड-आधारित लेनदेन शुरू कर दिया है।

अनुमान:

I. ग्राहकों से डिजिटल तरीकों का अधिक उपयोग करने की अपेक्षा की जाती है।

II. पारंपरिक बैंकिंग काउंटरों को चरणबद्ध तरीके से समाप्त कर दिया जाएगा।

Only I follows

केवल I अनुसरण करता है

Only II follows

केवल II अनुसरण करता है

Both follow

दोनों अनुसरण करते हैं

Neither follows

कोई भी अनुसरण नहीं करता है

[Click Here to Challenge Question No.: 6](#)Q.No: 6 If  $6 + 2 = 16$ ,  $7 + 3 = 25$ , then  $8 + 4 = ?$ अगर  $6 + 2 = 16$ ,  $7 + 3 = 25$ , तो  $8 + 4 = ?$ 

32

32

28

28

36

36

27

27

[Click Here to Challenge Question No.: 7](#)

Q.No: 7 What should come in place of the question mark '?' in the following number series?

14, 26, 50, 98, 194, ?

निम्नलिखित संख्या श्रृंखला में प्रश्न चिन्ह '?' के स्थान पर क्या आएगा?

14, 26, 50, 98, 194, ?

386

386

376

376

366

366

296

296

[Click Here to Challenge Question No.: 8](#)

Q.No: 8 What will come in the place of question mark (?) in the following number series?  
2, 3, -1, 8, -8, ?

निम्नलिखित संख्या श्रृंखला में प्रश्न चिन्ह (?) के स्थान पर क्या आएगा?  
2, 3, -1, 8, -8, ?

21

21

17

17

16

16

15

15

[Click Here to Challenge Question No.: 9](#)

Q.No: 9 If digits of 642 are reversed and added to the original number, what is the result?  
अगर 642 के अंकों को उलट दिया जाए और मूल संख्या में जोड़ दिया जाए, तो परिणाम क्या होगा?

1284

1284

888

888

1212

1212

1197

1197

[Click Here to Challenge Question No.: 10](#)



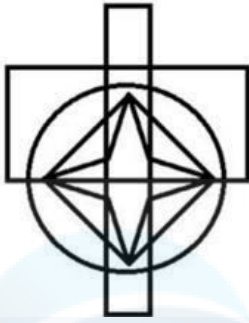
Q.No: 10 Select the option that is embedded in the given figure. (Rotation is NOT allowed)





दी गई छवि में निहित विकल्प का चयन करें। (घूमाव की अनुमति नहीं है)

<https://sscstudy.com/>

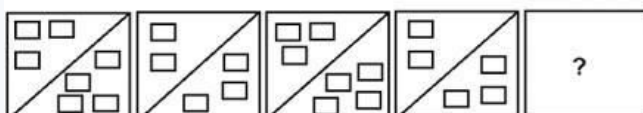


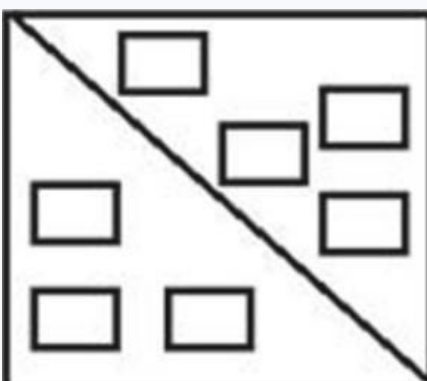
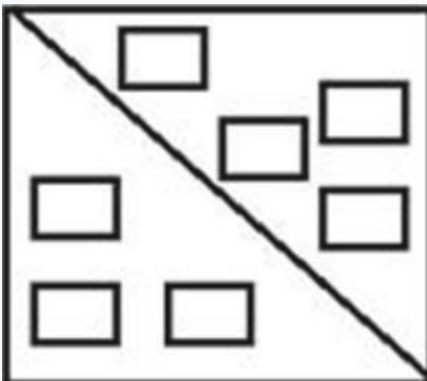
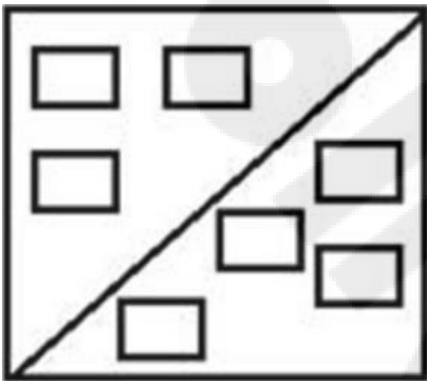
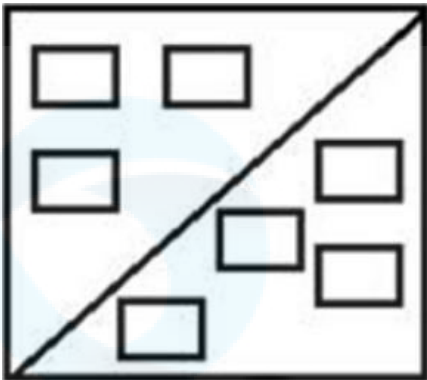
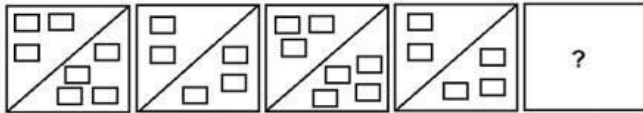
<https://sscstudy.com/>

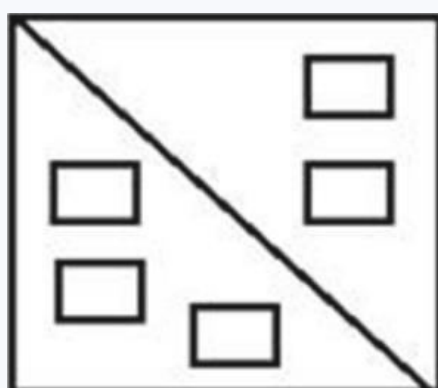
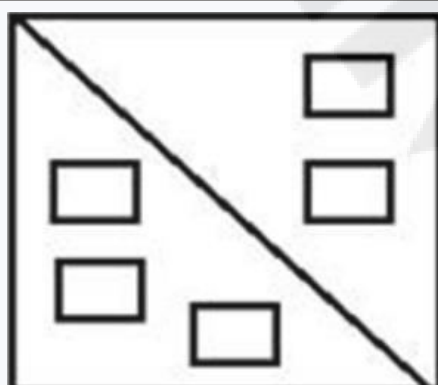
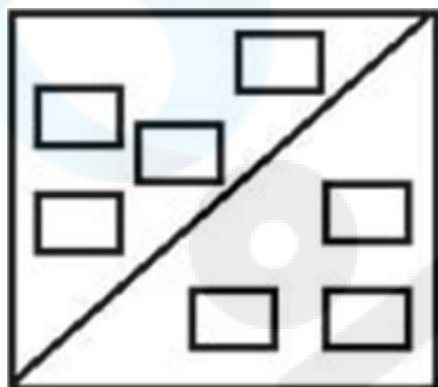
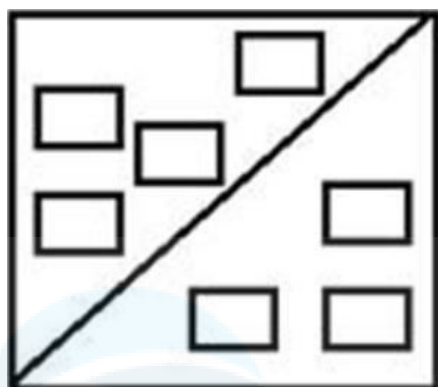


[Click Here to Challenge Question No.: 11](#)

Q.No: 11 Select an appropriate figure from the four options that will come next in the following figure.






[Click Here to Challenge Question No.: 12](#)

Q.No: 12 Which is the odd one out?  
इन में से कौन सा विषम है?

Table  
मेज़

Fan  
पंखा

Bed

	बिस्तर	<a href="https://sscstudy.com/">https://sscstudy.com/</a>
	Kidney	
	किडनी	

[Click Here to Challenge Question No.: 13](#)

Q.No: 13	Which code has a digit-letter sequence that doesn't follow a repeated unit? किस कोड में अंक-अक्षर अनुक्रम है जो किसी दोहराए गए यूनिट का अनुसरण नहीं करता है?
	1A2B1A2B 1A2B1A2B
	3C4D3C4D 3C4D3C4D
	5E6F7E6F 5E6F7E6F
	7G8H7G8H 7G8H7G8H

[Click Here to Challenge Question No.: 14](#)

Q.No: 14

Study the given pattern carefully and select the number that can replace the question mark [?] in it.

14	12	7	15
21	29	15	18
245	287	154	?

दिए गए पैटर्न का ध्यानपूर्वक अध्ययन करें और उस संख्या का चयन करें जो इसमें प्रश्न चिह्न [?] को प्रतिस्थापित कर सकती है।

14	12	7	15
21	29	15	18
245	287	154	?

312

312

278

278

231

231

332

332

[Click Here to Challenge Question No.: 15](#)

Q.No: 15	You're a forest officer and a local festival causes pollution in a sensitive zone. What is your best step? आप एक वन अधिकारी हैं और एक स्थानीय त्यौहार संवेदनशील क्षेत्र में प्रदूषण का कारण बनता है। आपका सबसे अच्छा कदम क्या है?
	Coordinate with local leaders for eco-friendly celebrations पर्यावरण अनुकूल समारोहों के लिए स्थानीय नेताओं के साथ समन्वय करें
	Ban the festival permanently त्यौहार पर स्थायी रूप से प्रतिबंध लगाएं

	Stay silent चुप रहें	<a href="https://sscstudy.com/">https://sscstudy.com/</a>
	Leave the zone क्षेत्र छोड़ें	

<a href="#">Click Here to Challenge Question No.: 16</a>		
Q.No: 16	Identify the number which does NOT belong to the group: उस संख्या को पहचानें जो समूह से संबंधित नहीं है:	
	11	
	11	
	13	
	13	
	15	
	15	
	17	
	17	

<a href="#">Click Here to Challenge Question No.: 17</a>		
Q.No: 17	Find the option that does not fit the series pattern: 7, 12, 19, 28, 39, 51, 67, 84 वह विकल्प ज्ञात करें जो श्रृंखला पैटर्न में फिट नहीं बैठता है: 7, 12, 19, 28, 39, 51, 67, 84	
	19	
	19	
	28	
	28	
	39	
	39	
	51	
	51	

<a href="#">Click Here to Challenge Question No.: 18</a>	
Q.No: 18	<p>Directions: Study the following information carefully and answer the questions based on it.</p> <p>Comprehension:</p> <p>Seven boxes are kept one above another to make up a stack. The topmost box is numbered as 1, while the bottommost box is numbered as 7. Each box contains different fruits, including Apples, Oranges, Cherries, Bananas, Melons, Kiwis, and Mangoes. Each box contains a different number of fruit: 10, 20, 30, 40, 50, 60, and 70.</p> <p>There are 20 Oranges. The box of Bananas is two boxes above the box of Melon. There are 70 Melons. There are 20 and 60 fruits in the topmost and bottommost boxes respectively. The box of Apples is just above the box of bananas. The box of Kiwi is just above the box of Mango. There are 30 Cherries in the box. The box containing 50 fruits is just above the box containing 10 fruits.</p> <p>There are ____ Apples.</p>

https://sscstudy.com/

बोधगम्यता:

सात बॉक्सों को एक के ऊपर एक रखकर एक ढेर बनाया गया है। सबसे ऊपर वाले बॉक्स को 1 और सबसे नीचे वाले बॉक्स को 7 नंबर दिया गया है। प्रत्येक बॉक्स में अलग-अलग फल हैं, जैसे सेब, संतरे, चेरी, केले, खरबूजे, कीवी और आम। प्रत्येक बॉक्स में अलग-अलग संख्या में फल हैं: 10, 20, 30, 40, 50, 60 और 70।

20 संतरे हैं। केले का बॉक्स खरबूजे के बॉक्स से दो बॉक्स ऊपर है। कुल 70 खरबूजे हैं। सबसे ऊपर और सबसे नीचे वाले बॉक्स में क्रमशः 20 और 60 फल हैं। सेब का बॉक्स केले के बॉक्स के ठीक ऊपर है। कीवी का बॉक्स आम के बॉक्स के ठीक ऊपर है। बॉक्स में 30 चेरी हैं। 50 फलों वाला बॉक्स, 10 फलों वाले बॉक्स के ठीक ऊपर है।

यहाँ \_\_\_\_ सेब हैं।

60

60

50

50

70

70

80

80

[Click Here to Challenge Question No.: 19](#)

Q.No: 19 Directions: These questions are based on the following information.

In a family there are eight members, P, Q, R, S, T, U, V, and W. V is the sister of the mother of U. W is the father of Q who is the brother of U. R is married to V. T is the father-in-law of W. S is the daughter of R.

How is P related to S?

निर्देश: निम्नलिखित जानकारी के आधार पर प्रश्नों के उत्तर दें।

एक परिवार में आठ सदस्य क्रमशः P, Q, R, S, T, U, V और W हैं। V, U की माँ की बहन है। W, Q का पिता है जो U का भाई है। R का विवाह V से हुआ है। T, W का ससुर है। S, R की पुत्री है।

P, S से किस प्रकार संबंधित है?

Maternal Uncle

मामा

Maternal Aunt

मौसी

Brother

भाई

Mother

माँ

[Click Here to Challenge Question No.: 20](#)

Q.No: 20 Direction: These questions are based on the following information.

There is a family of 7 members: Puja, Payal, Paras, Preet, Palak, Pia and Parth. In that family, there are 3 generations having 2 married couples among them. Preet is brother in law of Paras.

Puja is daughter in law of Pia. Pia and Parth is married couple who has only 1 son. Palak is sister of Payal. Payal is daughter of Paras. Parth is father of Paras.

How many male members are there in a family?

	<p>निर्देश: निम्नलिखित जानकारी के आधार पर प्रश्नों के उत्तर दें।</p> <p>7 सदस्यों का एक परिवार है: पूजा, पायल, पारस, प्रीत, पलक, पिया और पार्थ। उस परिवार में, 3 पीढ़ियाँ हैं जिनमें 2 विवाहित जोड़े हैं। प्रीत, पारस का ब्रदर-इन-लॉ है। पूजा, पिया की बहू है। पिया और पार्थ विवाहित जोड़े हैं जिनका केवल 1 पुत्र है। पलक, पायल की बहन है। पायल, पारस की पुत्री है। पार्थ, पारस का पिता है। परिवार में कितने पुरुष सदस्य हैं?</p>	<a href="https://sscstudy.com/">https://sscstudy.com/</a>
	4	
	4	
	2	
	2	
	3	
	3	
	5	
	5	

<a href="#">Click Here to Challenge Question No.: 21</a>		
Q.No: 21	<p>Read the following statement carefully and identify the conclusion that follows.</p> <p>Statement: All books are papers. Some papers are journals.</p> <p>Conclusions: I. Some journals are books. II. Some papers are books.</p> <p>निम्नलिखित कथन को ध्यानपूर्वक पढ़ें और निष्कर्ष निकालें।</p> <p>कथन: सभी पुस्तकें पेपर हैं। कुछ पेपर जर्नल हैं।</p> <p>निष्कर्ष: I. कुछ जर्नल पुस्तकें हैं। II. कुछ पेपर पुस्तकें हैं।</p>	
	<p>Only I follows केवल I अनुसरण करता है</p>	
	<p>Only II follows केवल II अनुसरण करता है</p>	
	<p>Both I and II follow I और II दोनों अनुसरण करते हैं</p>	
	<p>Neither I nor II follows न तो I और न ही II अनुसरण करता है</p>	

<a href="#">Click Here to Challenge Question No.: 22</a>		
Q.No: 22	<p>Read the following statement carefully and identify the conclusion that follows.</p> <p>Statement: Some cars are electric. All electric vehicles are eco-friendly. Some eco-friendly things are expensive.</p> <p>Conclusions: I. Some cars may be eco-friendly. II. Some expensive things are not cars.</p>	



निम्नलिखित कथन को ध्यानपूर्वक पढ़ें और निष्कर्ष निकालें।

कथन:

कुछ कारें इलेक्ट्रिक हैं। सभी इलेक्ट्रिक वाहन पर्यावरण के अनुकूल हैं। कुछ पर्यावरण के अनुकूल चीजें महंगी होती हैं।

निष्कर्ष:

I. कुछ कारें पर्यावरण के अनुकूल हो सकती हैं।

II. कुछ महंगी चीजें कारें नहीं हैं।

Only I follows

केवल I अनुसरण करता है

Only II follows

केवल II अनुसरण करता है

Both I and II follow

I और II दोनों अनुसरण करते हैं

Neither I nor II follows

न तो I और न ही II अनुसरण करता है

[Click Here to Challenge Question No.: 23](#)

Q.No: 23

Complete the series.

A1, C2, E3, G4, ?

निम्नलिखित श्रृंखला को पूरा करें।

A1, C2, E3, G4, ?

I5

I5

J6

J6

H5

H5

I4

I4

[Click Here to Challenge Question No.: 24](#)

Q.No: 24

What is the next number in the series?

1, 4, 16, \_\_

निम्नलिखित श्रृंखला में अगले स्थान पर कौन सी संख्या होगी?

1, 4, 16, \_\_

32

32

64

64

48

48

60

60

[Click Here to Challenge Question No.: 25](#)

Q.No: 25

Which of the following is different from the rest?

	निम्नलिखित में से कौन सा बाकी से अलग है?	<a href="https://sscstudy.com/">https://sscstudy.com/</a>
	11	
	11	
	13	
	13	
	17	
	17	
	21	
	21	

<a href="#">Click Here to Challenge Question No.: 26</a>		
Q.No: 26	What comes next? 5, 10, 8, 16, 14, ? निम्नलिखित श्रृंखला में अगले स्थान पर कौन सा विकल्प आएगा? 5, 10, 8, 16, 14, ?	
	22.	
	22.	
	20	
	20	
	19	
	19	
	28	
	28	

<a href="#">Click Here to Challenge Question No.: 27</a>		
Q.No: 27	Identify the group that does NOT match the consecutive pattern . PQ, QR, RS, ST, SV उस समूह की पहचान करें जो क्रमागत पैटर्न से मेल नहीं खाता है। PQ, QR, RS, ST, SV	
	PQ	
	PQ	
	QR	
	QR	
	SV	
	SV	
	RS	
	RS	

<a href="#">Click Here to Challenge Question No.: 28</a>		
Q.No: 28	What comes next? AA, BC, CE, ? निम्नलिखित श्रृंखला में अगले स्थान पर कौन सा विकल्प आएगा? AA, BC, CE, ?	
	EG	
	EG	

	FH	<a href="https://sscstudy.com/">https://sscstudy.com/</a>
	FH	
	GI	
	GI	
	DG	
	DG	

[Click Here to Challenge Question No.: 29](#)

Q.No: 29	If STORM is coded as RSNQL, how is SHINE coded? अगर STORM को RSNQL के रूप में कोड किया जाता है, तो SHINE को किस प्रकार कोड किया जाएगा?
	RGHMD
	RGHMD
	RGHND
	RGHND
	RGHMF
	RGHMF
	RGIMD
	RGIMD

[Click Here to Challenge Question No.: 30](#)

Q.No: 30	If LAVEN is written as NEVAL, how is DAISY written? अगर LAVEN को NEVAL लिखा जाता है, तो DAISY को कैसे लिखा जाएगा?
	YSAID
	YSAID
	YSIAD
	YSIAD
	YSADI
	YSADI
	YDIAS
	YDIAS

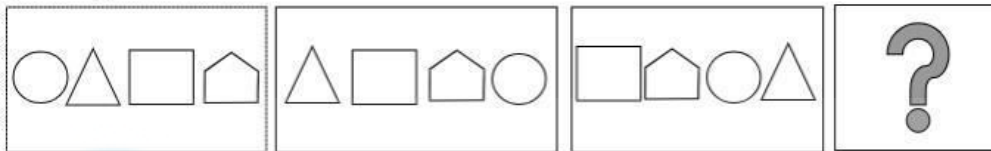
[Click Here to Challenge Question No.: 31](#)

Q.No: 31	Complete the series. 91, 86, __, 76, 71 निम्नलिखित श्रृंखला को पूरा करें। 91, 86, __, 76, 71
	83
	83
	81
	81
	80
	80
	79
	79

Q.No: 32

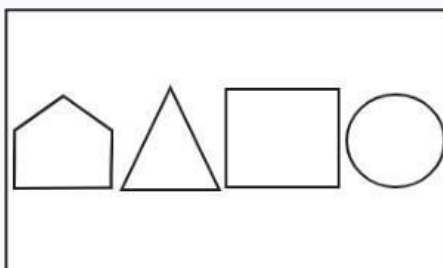
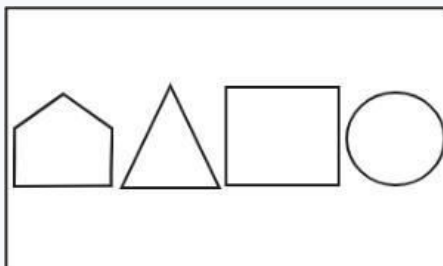

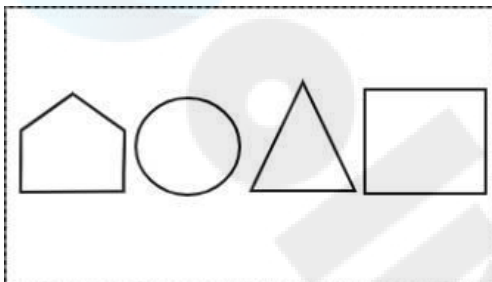
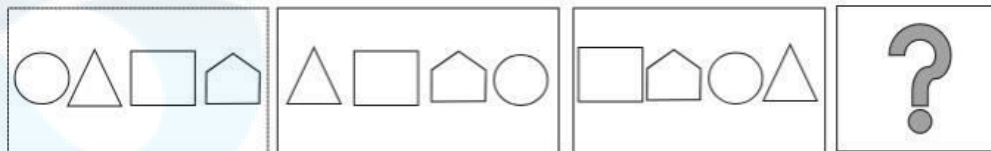
Find the one which completes the series:

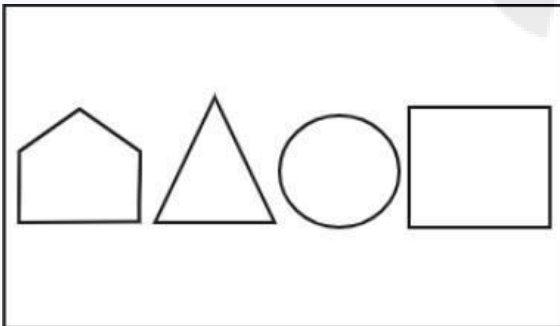
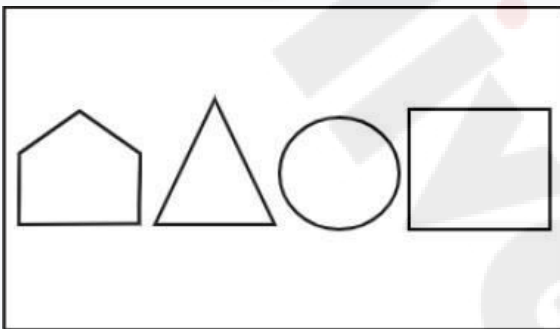
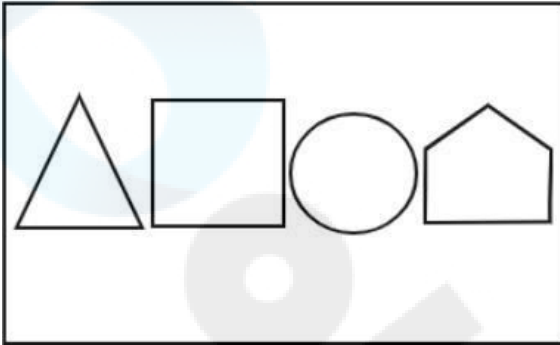

Question figure:



वह आकृति ज्ञात कीजिए जो श्रृंखला को पूरा करती है:

प्रश्न आकृति:




[Click Here to Challenge Question No.: 33](#)

Q.No: 33 Figure 1 and 2 are related with each other in some particular way. Find the relationship and establish the same relationship between 3 and 4 from the given four alternatives.

Figure 1:

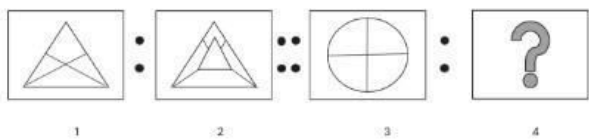
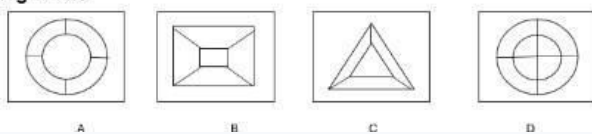
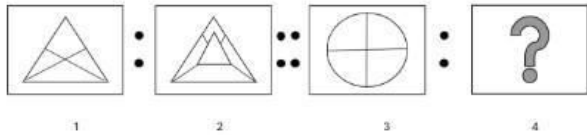


Figure 2:

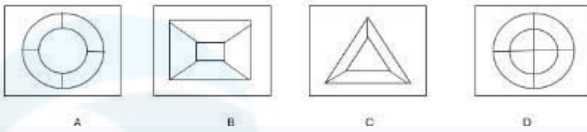


आकृति 1 और 2 किसी विशेष तरीके से एक-दूसरे से संबंधित हैं। दिए गए चार विकल्पों में से 3 और 4 के बीच संबंध ज्ञात कीजिए <https://sscstudy.com/> कीजिए।

चित्र 1:



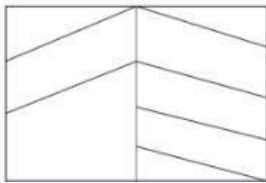
चित्र 2:



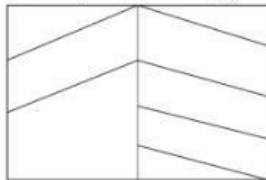
A  
A  
B  
B  
C  
C  
D  
D

[Click Here to Challenge Question No.: 34](#)

Q.No: 34 How many **quadrilaterals** are there in the given figure?



दी गई आकृति में कितने चतुर्भुज हैं?



21  
21  
22  
22  
19  
19  
18  
18

Not Answered

[Click Here to Challenge Question No.: 35](#)

Q.No: 35

What word is formed by (0,4)(4,3)(2,1)(3,4)?

<https://sscstudy.com/>

	0	1	2	3	4
0	J	B	D	C	L
1	F	I	A	J	H
2	D	A	K	L	E
3	B	K	G	I	A
4	K	C	E	L	L

(0,4)(4,3)(2,1)(3,4) से कौन सा शब्द बनेगा?

	0	1	2	3	4
0	J	B	D	C	L
1	F	I	A	J	H
2	D	A	K	L	E
3	B	K	G	I	A
4	K	C	E	L	L

LKAA

LKAA

LLLA

LLLA

LLKA

LLKA

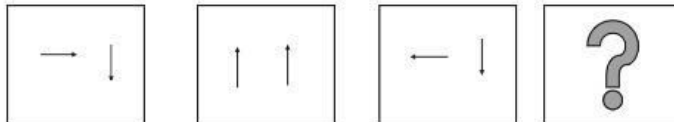
LLAA

LLAA

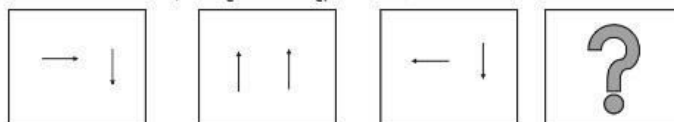
[Click Here to Challenge Question No.: 36](#)

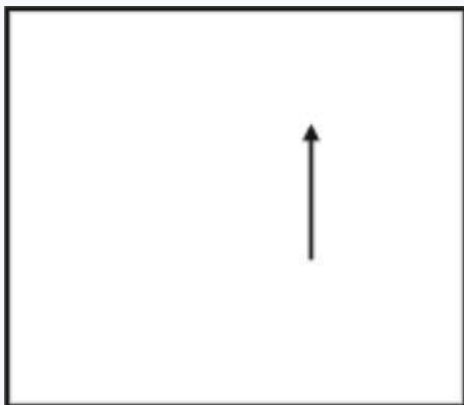
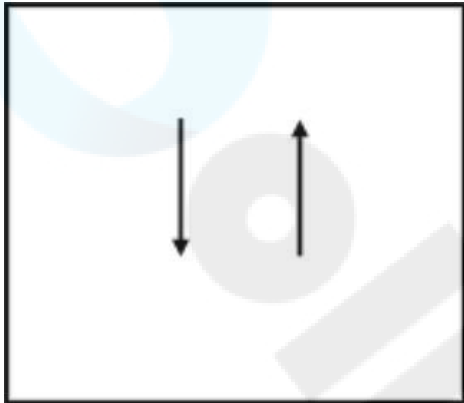
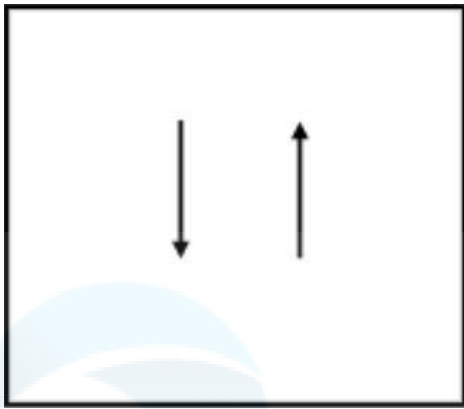
Q.No: 36

Find the one which completes the series:

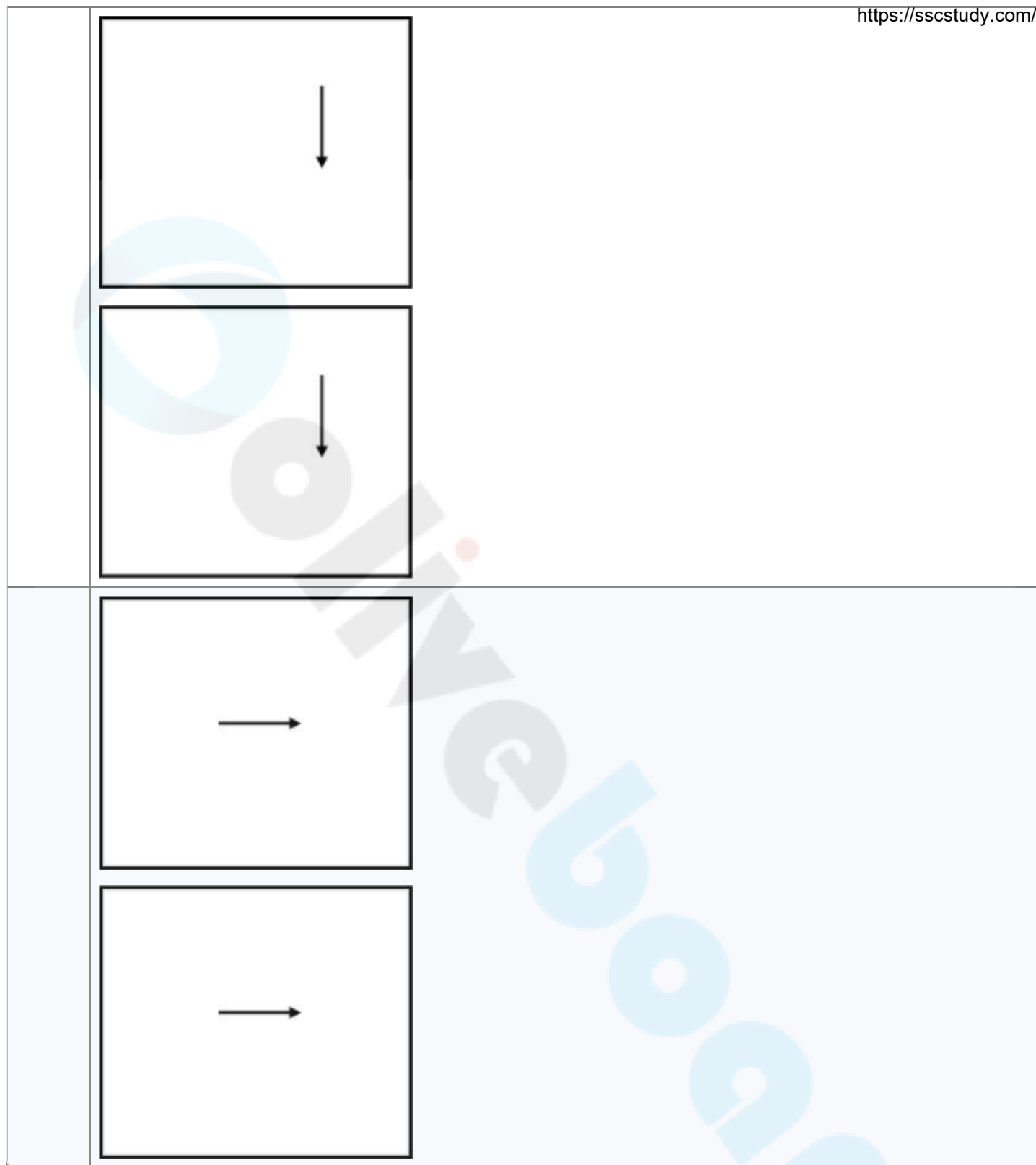


वह विकल्प ज्ञात कीजिए जो श्रृंखला को पूरा करता है:

<https://sscstudy.com/>






[Click Here to Challenge Question No.: 37](#)

Q.No: 37	The series given below contains a sequence of numbers. Accordingly identify the INCORRECT number. 40, 40, 37, 31, 21, 10 नीचे दी गई श्रृंखला में संख्याओं का एक अनुक्रम है। तदनुसार, गलत संख्या पहचानें। 40, 40, 37, 31, 21, 10
	37
	37
	31
	31

	10	<a href="https://sscstudy.com/">https://sscstudy.com/</a>
	10	
	21	
	21	
Not Answered		

<a href="#">Click Here to Challenge Question No.: 38</a>		
Q.No: 38	Complete the analogy. F : I :: L : ? सादृश्य को पूर्ण कीजिए। F : I :: L : ?	
	J	
	J	
	N	
	N	
	O	
	O	
	K	
	K	

<a href="#">Click Here to Challenge Question No.: 39</a>		
Q.No: 39	Complete the analogy. ZYX : WVU :: TSR : ? सादृश्य को पूर्ण कीजिए। ZYX : WVU :: TSR : ?	
	QPO	
	QPO	
	QRP	
	QRP	
	RQP	
	RQP	
	QOS	
	QOS	

<a href="#">Click Here to Challenge Question No.: 40</a>		
Q.No: 40	Find the missing term in the series: A, C, F, J, ? निम्न श्रेणी में लुप्त पद ज्ञात कीजिए। A, C, F, J, ?	
	O	
	O	
	P	
	P	
	N	
	N	

[Click Here to Challenge Question No.: 41](#)

Q.No: 41 Select the option that does NOT belong to the same category as the others:

Amazon, Nile, Mississippi, Sahara

उस विकल्प का चयन कीजिए, जो अन्य विकल्पों की श्रेणी से संबंधित नहीं है।

अमेजन, नील, मिसिसिप्पी, सहारा

Amazon

अमेजन

Sahara

सहारा

Nile

नील

Mississippi

मिसिसिप्पी

[Click Here to Challenge Question No.: 42](#)

Q.No: 42 In five even-numbered houses, 10-18: K lives at the top; J is one house above H; L is the lowest; M is between H and K.

Who is at 14?

पाँच सम संख्या, 10-18 वाले घरों में: K सबसे ऊपर रहता है; J, H से एक घर ऊपर रहता है; L सबसे नीचे रहता है; H और K के बीच में M रहता है।

14 पर कौन रहता है?

H

H

J

J

M

M

L

L

[Click Here to Challenge Question No.: 43](#)

Q.No: 43 Statement: "To promote reading, the library will start weekend storytelling sessions for children."

Which conclusion follows?

कथन: "पढ़ने को बढ़ावा देने के लिए, पुस्तकालय बच्चों के लिए सप्ताहांत कहानी सुनाने के सत्र शुरू करेगा।"

कौन सा निष्कर्ष अनुसरण करता है?

Adult members dislike weekends

वयस्क सदस्यों को सप्ताहांत नापसंद होता है

The library wants to attract young readers

पुस्तकालय युवा पाठकों को आकर्षित करना चाहता है

Only children visit libraries

पुस्तकालयों में केवल बच्चे ही जाते हैं

[Click Here to Challenge Question No.: 44](#)

Q.No: 44	In a heated group discussion, what should an emotionally intelligent person do? एक गरमागरम समूह चर्चा में, एक भावनात्मक रूप से बुद्धिमान व्यक्ति को क्या करना चाहिए?
	Take sides immediately तुरंत पक्ष लें
	Shout to make a point अपनी बात रखने के लिए चिल्लाओ
	Leave angrily गुस्से में चले जाओ
	Calmly listen to both sides दोनों पक्षों को शांतिपूर्वक सुनें

[Click Here to Challenge Question No.: 45](#)

Q.No: 45	You notice your manager is unusually silent in a crucial meeting after a recent personal loss. The team expects decisions. What is the best action? आप देखते हैं कि हाल ही में हुई एक व्यक्तिगत क्षति के बाद एक महत्वपूर्ण बैठक में आपका मैनेजर असामान्य रूप से चुप है। टीम को फैसलों की उम्मीद होती है। सर्वोत्तम क्रिया क्या है?
	Take the initiative for key discussions and offer support afterwards महत्वपूर्ण चर्चाओं के लिए पहल करें और समर्थन प्रदान करें
	Remain silent until the manager speaks प्रबंधक के बोलने तक चुप रहें
	Ask intrusive questions about their loss उनके नुकसान के बारे में दखल देने वाले प्रश्न पूछें
	Criticise the lack of leadership नेतृत्व की कमी की आलोचना करें

[Click Here to Challenge Question No.: 46](#)

Q.No: 46	Arrange as per dictionary order and select the word that is second in order: CLINIC, CLING, CLINK, CLINT नीचे दिए गए शब्दों को शब्दकोश क्रम के अनुसार व्यवस्थित कीजिए और क्रम में दूसरे स्थान पर आने वाले शब्द का चयन कीजिए। CLINIC, CLING, CLINK, CLINT
	CLING CLING
	CLINK CLINK
	CLINIC CLINIC
	CLINT

[Click Here to Challenge Question No.: 47](#)

Q.No: 47 If 'P is husband of Q' and 'R is son of Q', how is R related to P?  
यदि 'P, Q का पति है' और 'R, Q का पुत्र है', तो R का P से क्या संबंध है?

Brother

भाई

Cousin

कज़िन

Nephew

भतीजा/भांजा

Son

पुत्र

[Click Here to Challenge Question No.: 48](#)

Q.No: 48 Find the odd one out in the given semantic series based on the pattern identified.

Iron, Platinum, Zinc, Lead

पहचाने गए पैटर्न के आधार पर दी गई अर्थ श्रृंखला में से विषम को ज्ञात कीजिए।

लोहा, प्लैटिनम, जस्ता, सीसा

Iron

लोहा

Platinum

प्लैटिनम

Zinc

जस्ता

Lead

सीसा

[Click Here to Challenge Question No.: 49](#)

Q.No: 49 Complete the analogy.

Clock : Time :: Thermometer : ?

सादृश्य पूरा करें।

घड़ी : समय :: थर्मामीटर : ?

Heat

गर्मी

Mercury

पारा

Temperature

तापमान

Weather

मौसम

Q.No: 50 Complete the analogy.  
Evaporate : Vapour :: Condense : ?  
सादृश्य पूरा करें।  
वाष्पित होना : वाष्प :: संघनित होना : ?

Liquid  
तरल

Ice  
बर्फ

Rain  
बारिश

Gas  
गैस



## CANDIDATE RESPONSE SHEET/GRIEVANCE SYSTEM

[View Your Responses](#)[Click Here to View Grievance Questions](#)Admin loggedin.[ [Logout](#) ]

Roll No.

Exam Level

: SSC SICPO ▾

Test Date

: 09 Dec 2025

Test Time and Shift

: 03:00 PM (Shift-2)

[Correct Option selected](#) [Wrong Option selected](#) [Correct Option](#) [Not Answered](#)[Save / Print](#)**Undertaking by the candidate :**

I acknowledge that this saved question paper is for my personal use and self-analysis only. I understand that sharing, distributing, or using it for commercial or any other purposes is strictly prohibited and may lead to legal action as per applicable acts, rules and regulations.

**Note:**

The candidates may note that in the challenge module the sequence of the questions and the options may be different from how it appeared during the examination. This is because in the challenge module the sequence of the questions as well as the answers will be the same for all the candidates who appeared in a particular shift while during the actual examination these sequences were different for different candidates. However the answer key selected by the candidates during the examination will exactly be reflected in the challenge module.

[Click Here for PART-A](#)[Click Here for PART-B](#)[Click Here for PART-C](#)[Click Here for PART-D](#)**PART-B (General Knowledge and General Awareness)**[Click Here to Challenge Question No.: 51](#)

Q.No: 51 The World Happiness Report primarily relies on which type of data?

विश्व प्रसन्नता रिपोर्ट मुख्यतः किस प्रकार के डेटा पर आधारित होती है?

Objective economic indicators only

केवल वस्तुनिष्ठ आर्थिक संकेतक

Subjective life evaluations and well-being measures

व्यक्तिपरक जीवन मूल्यांकन और कल्याण उपाय

Environmental sustainability metrics

पर्यावरणीय स्थिरता मीट्रिक्स

Military strength and geopolitical stability

सैन्य शक्ति और भू-राजनीतिक स्थिरता

[Click Here to Challenge Question No.: 52](#)

Q.No: 52 The Bhakti saint who propagated devotion to Rama in the Awadhi dialect was:

वह भक्ति संत जिन्होंने अवधी बोली में राम भक्ति का प्रचार किया, वे थे:

	Kabir कबीर	<a href="https://sscstudy.com/">https://sscstudy.com/</a>
	Tulsidas तुलसीदास	
	Surdas सूरदास	
	Namdev नामदेव	

<a href="#">Click Here to Challenge Question No.: 53</a>		
Q.No: 53	What is the primary purpose of Article 312 of the Indian Constitution? भारतीय संविधान के अनुच्छेद 312 का प्राथमिक उद्देश्य क्या है?	
	To regulate the appointment of Supreme Court judges सर्वोच्च न्यायालय के न्यायाधीशों की नियुक्ति को विनियमित करना	
	To create All India Judicial Services अखिल भारतीय न्यायिक सेवाएं बनाना	
	To determine the qualification of Members of Parliament संसद सदस्यों की योग्यता निर्धारित करना	
	To define the power of the Attorney General अटॉर्नी जनरल की शक्ति को परिभाषित करना	

Click Here to Challenge Question No.: 54

Q.No: 54	The Fit India Movement, promoting fitness and sports culture, was launched in which year? फिटनेस और खेल संस्कृति को बढ़ावा देने वाला फिट इंडिया मूवमेंट किस वर्ष शुरू किया गया था?
	2017 2017
	2018 2018
	2019 2019
	2020 2020

Not Answered

<a href="#">Click Here to Challenge Question No.: 55</a>		
Q.No: 55	The inaugural season of the Hockey India League took place in 2013. Which city hosted the final match? हॉकी इंडिया लीग का उद्घाटन सत्र 2013 में हुआ था। फाइनल मैच की मेजबानी किस शहर ने की थी?	
	Delhi दिल्ली	
	Ranchi रांची	
	Lucknow लखनऊ	



Not Answered

[Click Here to Challenge Question No.: 56](#)

Q.No: 56 What is the classical feature of Ashokan pillars?

अशोक स्तंभों की शास्त्रीय विशेषता क्या है?

They had capitals topped with lion sculptures.

उनके शीर्ष पर सिंह की मूर्तियां बनी हुई थीं।

They were only found in South India.

वे केवल दक्षिण भारत में पाए जाते थे।

They were made of bronze and silver.

वे कांसे और चांदी से बने थे।

They served as fire altars.

वे अग्नि वेदिका के रूप में कार्य करते थे।

[Click Here to Challenge Question No.: 57](#)

Q.No: 57 In which city is the sculptural panel of "Descent of the Ganges" located?

"गंगा अवतरण" का मूर्तिकला पैनल किस शहर में स्थित है?

Ellora

एलोरा

Mahabalipuram

महाबलीपुरम

Pattadakal

पट्टदकल

Badami

बादामी

[Click Here to Challenge Question No.: 58](#)

Q.No: 58 Which Nigerian author won the Women's Prize for Fiction in 2007 for "Half of a Yellow Sun"?

किस नाइजीरियाई लेखिका ने "हाफ ऑफ ए येलो सन" के लिए 2007 में महिला कथा पुरस्कार जीता?

Chimamanda Ngozi Adichie

चिमामांडा नगोजी अदिची

Buchi Emecheta

बुची एमेचेटा

Lola Shoneyin

लोला शोनेयिन

Sefi Atta

सेफी आटा

Not Answered

Q.No: 59	What is the duration of each half in a standard kabaddi match (men's)? एक मानक कबड्डी मैच (पुरुष) में प्रत्येक हाफ की अवधि कितनी होती है?
	15 mins 15 मिनट
	20 mins 20 मिनट
	30 mins 30 मिनट
	25 mins 25 मिनट

Q.No: 60	Which of these is NOT a feature of Kathakali performances? इनमें से कौन सी कथकली प्रदर्शन की विशेषता नहीं है?
	Masked performances नकाबपोश प्रदर्शन
	Actors use facial expressions and hand gestures अभिनेता चेहरे के भाव और हाथ के हाव-भाव का उपयोग करते हैं
	The performance includes live singing इस प्रदर्शन में लाइव गायन भी शामिल है
	The performance is silent with no vocalization यह प्रदर्शन मौन है, इसमें कोई स्वर नहीं है

Q.No: 61	"Raslila" is a traditional dance of which state? 'रासलीला' किस राज्य का पारंपरिक नृत्य है?
	Punjab पंजाब
	Uttar Pradesh उत्तर प्रदेश
	Kerala केरल
	West Bengal पश्चिम बंगाल

Q.No: 62	Which of the following works was authored by Varahamihira? निम्नलिखित में से कौन सी रचना वराहमिहिर द्वारा लिखी गई थी?
	Mrichchakatika मृच्छकटिका

	Sushruta Samhita सुश्रुत संहिता	<a href="https://sscstudy.com/">https://sscstudy.com/</a>
	Brihat Samhita बृहत् संहिता	
	Dashakumaracharita दशकुमारचरित	

<a href="#">Click Here to Challenge Question No.: 63</a>		
Q.No: 63	Who among the following was the author of Virasoliyam? निम्नलिखित में से वीरसोलियम के लेखक कौन थे?	
	Buddhamitra बुद्धमित्र	
	Ottakuthar ओट्टाकुथर	
	Amirthasagarar अमिरथासागर	
	Sekkilar सेक्किलर	
Not Answered		

<a href="#">Click Here to Challenge Question No.: 64</a>		
Q.No: 64	What is the central theme of Mando music from Goa? गोवा के मांडो संगीत का केंद्रीय विषय क्या है?	
	Religious devotion धार्मिक भक्ति	
	War and heroism युद्ध और वीरता	
	Love and historical narratives प्रेम और ऐतिहासिक आख्यान	
	Nature and philosophy प्रकृति और दर्शन	

<a href="#">Click Here to Challenge Question No.: 65</a>		
Q.No: 65	Ugadi falls in the first month of the Hindu calendar called: उगादी हिंदू कैलेंडर के पहले महीने में आता है जिसे कहा जाता है:	
	Vaishakha वैशाख	
	Magha माघ	
	Chaitra चैत्र	

[Click Here to Challenge Question No.: 66](#)Q.No: 66 Which of the following is **true** about the Yaoshang Festival in Manipur?मणिपुर में याओशांग महोत्सव के बारे में निम्नलिखित में से कौन सा कथन **सत्य** है?

Thabal Chongba is a moonlight circle dance

थबल चोंगबा एक चांदनी चक्राकार नृत्य है

Pala Eshei sung by unmarried youths

अविवाहित युवकों द्वारा गाया गया पाला एशेई

Includes academic quiz competitions

इसमें शैक्षणिक प्रश्नोत्तरी प्रतियोगिताएं भी शामिल हैं

Marks the start of harvest season

फसल कटाई के मौसम की शुरुआत का प्रतीक

[Click Here to Challenge Question No.: 67](#)

Q.No: 67 Which of the following pairs of musical forms/artists and their characteristics is correctly matched?

निम्नलिखित में से संगीत रूपों/कलाकारों और उनकी विशेषताओं का कौन सा युग्म सही सुमेलित है?

Rampur Saheswan Gharana – Fast note patterns, technically demanding

रामपुर सहेसवान घराना - तेज़ स्वर पैटर्न, तकनीकी रूप से कठिन

Thumri (Banaras Style) – Known for lyrical khayals followed by Tarana

ठुमरी (बनारस शैली) - तराना के बाद गेय खयाल के लिए जानी जाती है

Tappa – Prominent exponent of lyrical love songs (Thumri)

टप्पा - गीतात्मक प्रेम गीतों (ठुमरी) के प्रमुख प्रतिपादक

Rasoolan Devi – Slow, expressive, emphasizes mood over strict grammar

रसूलन देवी - धीमी, अभिव्यंजक, सख्त व्याकरण की तुलना में मूड पर जोर देती है

Not Answered

[Click Here to Challenge Question No.: 68](#)

Q.No: 68 Analyze the following statements about Handball rules and court specifications:

**Assertion (A):**The free-throw line in handball is drawn 3 meters outside the goal area line, and it is represented by a broken line.**Reason (R):**The segments of the free-throw line are 15 cm long, with spaces of 15 cm between them.**हैंडबॉल नियमों और कोर्ट विनिर्देशों के बारे में निम्नलिखित कथनों का विश्लेषण करें:****अभिकथन (A):** हैंडबॉल में फ्री-थ्रो लाइन गोल क्षेत्र रेखा से 3 मीटर बाहर खींची जाती है, और इसे एक टूटी हुई रेखा द्वारा दर्शाया जाता है।**कारण (R):** फ्री-थ्रो लाइन के खंड 15 सेमी लंबे होते हैं, जिनके बीच 15 सेमी की जगह होती है।

Both A and R are true, and R is the correct explanation of A.

A और R दोनों सत्य हैं, तथा R, A का सही स्पष्टीकरण है।

Both A and R are true, but R is not the correct explanation of A.

A और R दोनों सत्य हैं, लेकिन R, A का सही स्पष्टीकरण नहीं है।

A is true, but R is false.

A सत्य है, लेकिन R असत्य है।

A is false, but R is true.

[Click Here to Challenge Question No.: 69](#)

Q.No: 69 In which year did Babur take control of Kabul?

बाबर ने काबुल पर कब्ज़ा किस वर्ष किया?

1500 CE

1500 CE

1508 CE

1508 CE

1504 CE

1504 CE

1512 CE

1512 CE

[Click Here to Challenge Question No.: 70](#)

Q.No: 70 Which system, introduced by the Government of India Act of 1919, classified provincial subjects into "reserved" and "transferred" categories?

भारत सरकार अधिनियम 1919 द्वारा शुरू की गई किस प्रणाली ने प्रांतीय विषयों को "आरक्षित" और "हस्तांतरित" श्रेणियों में वर्गीकृत किया?

Dyarchy

द्विशासन

Federation

फेडरेशन

Bicameralism

द्विसदन

Responsible Government

उत्तरदायी सरकार

[Click Here to Challenge Question No.: 71](#)

Q.No: 71 Which of the following correctly describes the responsibilities of Madras and Bombay governors after 1773?

निम्नलिखित में से कौन सा कथन 1773 के बाद मद्रास और बम्बई के गवर्नरों की जिम्मेदारियों का सही वर्णन करता है?

They operated independently of the Bengal Governor-General.

वे बंगाल के गवर्नर-जनरल से स्वतंत्र रूप से कार्य करते थे।

They had to report to the Governor-General on war, peace, and revenue.

उन्हें युद्ध, शांति और राजस्व पर गवर्नर-जनरल को रिपोर्ट करनी होती थी।

They managed trade but not civil administration.

वे व्यापार का प्रबंधन तो करते थे, लेकिन नागरिक प्रशासन का नहीं।

They were answerable only to the Court of Directors in London.

वे केवल लंदन स्थित निदेशक न्यायालय के प्रति जवाबदेह थे।

[Click Here to Challenge Question No.: 72](#)

Q.No: 72	Who is the author of 'The Glass Palace'?	<a href="https://sscstudy.com/">https://sscstudy.com/</a>
	'द ग्लास पैलेस' के लेखक कौन हैं?	
	Amitav Ghosh	
	अमिताव घोष	
	Vikram Seth	
	विक्रम सेठ	
	Salman Rushdie	
	सलमान रुश्दी	
	Raj Kamal Jha	
	राज कमल झा	

[Click Here to Challenge Question No.: 73](#)

Q.No: 73	Who led the four-member Indian judo team at the Asian Games 2023 in Hangzhou?
	हांगजो में 2023 एशियाई खेलों में चार सदस्यीय भारतीय जूडो टीम का नेतृत्व किसने किया?
	Avtar Singh
	अवतार सिंह
	Indubala Devi Maibam
	इंदुबाला देवी मैबाम
	Tulika Maan
	तुलिका मान
	Garima Choudhary
	गरिमा चौधरी
Not Answered	

[Click Here to Challenge Question No.: 74](#)

Q.No: 74	Who was conferred Brazil's highest civilian honour, "The Grand Collar of the National Order of the Southern Cross," in 2025?
	2025 में ब्राज़ील का सर्वोच्च नागरिक सम्मान, "द ग्रैंड कॉलर ऑफ़ द नेशनल ऑर्डर ऑफ़ द सदर्न क्रॉस" किसे प्रदान किया गया?
	Nirmala Sitharaman
	निर्मला सीतारमण
	Narendra Modi
	नरेंद्र मोदी
	Rajnath Singh
	राजनाथ सिंह
	Mallikarjun Kharge
	मल्लिकार्जुन खड़गे

[Click Here to Challenge Question No.: 75](#)

Q.No: 75	Which of the following statements about the Indian Desert is correct?
	भारतीय रेगिस्तान के बारे में निम्नलिखित में से कौन सा कथन सही है?
	The Indian Desert lies to the east of the Aravali Hills and receives moderate rainfall.
	भारतीय रेगिस्तान अरावली पहाड़ियों के पूर्व में स्थित है और यहाँ मध्यम वर्षा होती है।
	It is a rocky plateau covered with dense forests and seasonal rivers.

<https://sscstudy.com/>



	यह एक चट्टानी पठार है जो घने जंगलों और मौसमी नदियों से ढका हुआ है।	<a href="https://sscstudy.com/">https://sscstudy.com/</a>
	The Indian Desert is an undulating sandy plain with sand dunes and receives less than 150 mm of rainfall annually. भारतीय रेगिस्तान रेत के टीलों वाला एक लहरदार रेतीला मैदान है और यहां प्रतिवर्ष 150 मिमी से भी कम वर्षा होती है।	
	The region lies in the southern part of the Deccan Plateau and is rich in black soil. यह क्षेत्र दक्कन पठार के दक्षिणी भाग में स्थित है और काली मिट्टी से समृद्ध है।	

[Click Here to Challenge Question No.: 76](#)

Q.No: 76	<p><b>Read the following Assertion (A) and Reason (R) carefully and choose the correct option:</b></p> <p><b>Assertion (A):</b> The eastern coastal plains of India are wider and flatter than the western coastal plains.</p> <p><b>Reason (R):</b> Large rivers like the Mahanadi, Godavari, Krishna, and Kaveri have created extensive deltas along the eastern coast.</p> <p><b>निम्नलिखित अभिकथन (A) और कारण (R) को ध्यानपूर्वक पढ़ें और सही विकल्प चुनें:</b></p> <p><b>अभिकथन (A):</b> भारत के पूर्वी तटीय मैदान पश्चिमी तटीय मैदानों की तुलना में अधिक चौड़े और समतल हैं।</p> <p><b>कारण (R):</b> महानदी, गोदावरी, कृष्णा और कावेरी जैसी बड़ी नदियों ने पूर्वी तट पर विस्तृत डेल्टा का निर्माण किया है।</p>
	Both A and R are true, and R is the correct explanation of A A और R दोनों सत्य हैं, और R, A का सही स्पष्टीकरण है
	Both A and R are true, but R is not the correct explanation of A A और R दोनों सत्य हैं, लेकिन R, A का सही स्पष्टीकरण नहीं है
	A is true, but R is false A सत्य है, लेकिन R असत्य है
	A is false, but R is true A असत्य है, लेकिन R सत्य है

[Click Here to Challenge Question No.: 77](#)

Q.No: 77	<p>Which three states in the Northern Plains region have the highest population densities?</p> <p>उत्तरी मैदानी क्षेत्र के किन तीन राज्यों में जनसंख्या घनत्व सबसे अधिक है?</p>
	Punjab, Haryana, Uttar Pradesh पंजाब, हरियाणा, उत्तर प्रदेश
	Uttarakhand, Bihar, Jharkhand उत्तराखंड, बिहार, झारखंड
	Bihar, West Bengal, Uttar Pradesh बिहार, पश्चिम बंगाल, उत्तर प्रदेश
	Assam, Haryana, Chhattisgarh असम, हरियाणा, छत्तीसगढ़

[Click Here to Challenge Question No.: 78](#)

Q.No: 78	<p>At which Lagrange point does the Aditya-L1 spacecraft orbit?</p> <p>आदित्य-एल1 अंतरिक्ष यान किस लैग्रेंज बिंदु पर परिक्रमा करता है?</p>
	L1 L1
	L2 L2
	GEO GEO

[Click Here to Challenge Question No.: 79](#)

Q.No: 79 What is the primary purpose of ISRO's GSAT-20 (GSAT-N2) satellite?

इसरो के जीसैट-20 (जीसैट-एन2) उपग्रह का प्राथमिक उद्देश्य क्या है?

It provides navigation services across the Indian subcontinent.

यह भारतीय उपमहाद्वीप में नेविगेशन सेवाएं प्रदान करता है।

It monitors weather patterns over the Indian Ocean.

यह हिंद महासागर के ऊपर मौसम के पैटर्न पर नज़र रखता है।

It delivers high-speed broadband services using Ka-band across India.

यह पूरे भारत में का-बैंड का उपयोग करके उच्च गति वाली ब्रॉडबैंड सेवाएं प्रदान करता है।

It is designed for Earth observation and remote sensing.

इसे पृथ्वी अवलोकन और सुदूर संवेदन के लिए डिज़ाइन किया गया है।

[Click Here to Challenge Question No.: 80](#)

Q.No: 80 Which of the following statements correctly defines population stabilization?

निम्नलिखित में से कौन सा कथन जनसंख्या स्थिरीकरण को सही ढंग से परिभाषित करता है?

It refers to the stage where fertility becomes higher than mortality

यह उस अवस्था को संदर्भित करता है जहां प्रजनन क्षमता मृत्यु दर से अधिक हो जाती है

It refers to zero birth rate

यह शून्य जन्म दर को संदर्भित करता है

It occurs when the difference between birth rate and death rate is negligible

यह तब होता है जब जन्म दर और मृत्यु दर के बीच का अंतर नगण्य होता है

It indicates exponential growth of urban population

यह शहरी जनसंख्या की घातीय वृद्धि को दर्शाता है

[Click Here to Challenge Question No.: 81](#)

Q.No: 81 Who took charge as new Cabinet Secretary of India in 2025?

2025 में भारत के नए कैबिनेट सचिव के रूप में किसने कार्यभार संभाला?

Dr. T.V. Somanathan

डॉ. टी.वी. सोमनाथन

Tarun Kapoor

तरुण कपूर

Sanjay Kumar

संजय कुमार

Arun Goel

अरुण गोयल

[Click Here to Challenge Question No.: 82](#)



Q.No: 82	Which industrial region in India is historically renowned for its dominance in the cotton textile industry and is often referred to as the "Manchester of India"?
	भारत का कौन सा औद्योगिक क्षेत्र ऐतिहासिक रूप से सूती वस्त्र उद्योग में अपने प्रभुत्व के लिए प्रसिद्ध है और इसे अक्सर "भारत का मैनचेस्टर" कहा जाता है?
	Chota Nagpur Industrial Region छोटा नागपुर औद्योगिक क्षेत्र
	Mumbai-Pune Industrial Region मुंबई-पुणे औद्योगिक क्षेत्र
	Hugli Industrial Region हुगली औद्योगिक क्षेत्र
	Ahmedabad-Vadodara Industrial Region अहमदाबाद-वडोदरा औद्योगिक क्षेत्र

[Click Here to Challenge Question No.: 83](#)

Q.No: 83	<p><b>Read the following statements marked as Assertion (A) and Reason (R). Choose the correct option:</b></p> <p><b>Assertion (A):</b> Spark Torch Igniters are being increasingly incorporated into advanced rocket engine designs for next-generation launch vehicles.</p> <p><b>Reason (R):</b> They provide superior multi-restart capability and consistent, reliable ignition in extreme conditions, allowing for more complex mission profiles and enabling engine reusability.</p> <p><b>अभिकथन (A) और कारण (R) से चिह्नित निम्नलिखित कथनों को पढ़िए। सही विकल्प चुनिए:</b></p> <p><b>अभिकथन (A):</b> अगली पीढ़ी के प्रक्षेपण यानों के लिए उन्नत रॉकेट इंजन डिज़ाइनों में स्पार्क टॉर्च इग्नाइटरों का उपयोग तेज़ी से किया जा रहा है।</p> <p><b>कारण (R):</b> ये बेहतर मल्टी-रीस्टार्ट क्षमता और चरम स्थितियों में निरंतर, विश्वसनीय प्रज्वलन प्रदान करते हैं, जिससे अधिक जटिल मिशन प्रोफाइल बनाना और इंजन का पुनः उपयोग संभव होता है।</p>
	Both A and R are true, and R is the correct explanation of A A और R दोनों सत्य हैं, और R, A का सही स्पष्टीकरण है
	Both A and R are true, but R is not the correct explanation of A A और R दोनों सत्य हैं, लेकिन R, A का सही स्पष्टीकरण नहीं है
	A is true, but R is false A सत्य है, लेकिन R असत्य है
	A is false, but R is true A असत्य है, लेकिन R सत्य है

[Click Here to Challenge Question No.: 84](#)

Q.No: 84	Which enzyme primarily is responsible for joining "Okazaki fragments" during the DNA replication process?
	डीएनए प्रतिकृति प्रक्रिया के दौरान "ओकाजाकी टुकड़ों" को जोड़ने के लिए मुख्य रूप से कौन सा एंजाइम जिम्मेदार है?
	DNA polymerase डीएनए पोलिमेरेज़
	DNA ligase डीएनए लाइगेज़
	Helicase हेलीकेस
	Primase प्राइमिज़

Not Answered

Q.No: 85	<p>Arrange these evolutionary events chronologically:</p> <p>A. First eukaryotes B. First prokaryotes C. Multicellularity D. Oxygen accumulation</p> <p>इन विकासवादी घटनाओं को कालानुक्रमिक क्रम में व्यवस्थित करें:</p> <p>A. प्रथम यूकेरियोट्स B. प्रथम प्रोकैरियोट्स C. बहुकोशिकीयता D. ऑक्सीजन संचयन</p>
	<p>B → D → A → C B → D → A → C</p>
	<p>A → B → D → C A → B → D → C</p>
	<p>D → B → A → C D → B → A → C</p>
	<p>B → A → C → D B → A → C → D</p>

Q.No: 86	<p>The Bharatiya Nagarik Suraksha Sanhita(BNSS) introduces a specific timeframe for pronouncing judgment after the conclusion of arguments in a criminal trial. What is this timeframe?</p> <p>भारतीय नागरिक सुरक्षा संहिता (बीएनएसएस) आपराधिक मुकदमे में बहस पूरी होने के बाद फैसला सुनाने के लिए एक विशिष्ट समय-सीमा निर्धारित करती है। यह समय-सीमा क्या है?</p>
	<p>Within 7 days 7 दिनों के भीतर</p>
	<p>Within 15 days 15 दिनों के भीतर</p>
	<p>Within 30 days (extendable to 45 days) 30 दिनों के भीतर (45 दिनों तक बढ़ाया जा सकता है)</p>
	<p>Within 60 days 60 दिनों के भीतर</p>

Not Answered

Q.No: 87	<p>Who has the authority to appoint a Sessions Judge of one sessions division as an Additional Sessions Judge of another division?</p> <p>एक सत्र खंड के सत्र न्यायाधीश को दूसरे खंड के अतिरिक्त सत्र न्यायाधीश के रूप में नियुक्त करने का अधिकार किसके पास है?</p>
	<p>District Magistrate जिला अधिकारी</p>
	<p>High Court उच्च न्यायालय</p>
	<p>Supreme Court सुप्रीम कोर्ट</p>
	<p>State Government राज्य सरकार</p>

[Click Here to Challenge Question No.: 88](#)

Q.No: 88	Which of the following is a key objective of the National Health Mission (NHM)? निम्नलिखित में से कौन सा राष्ट्रीय स्वास्थ्य मिशन (एनएचएम) का प्रमुख उद्देश्य है?
	Industrial growth औद्योगिक विकास
	Child mortality reduction बाल मृत्यु दर में कमी
	Space exploration अंतरिक्ष अन्वेषण
	Wildlife protection वन्यजीव संरक्षण

[Click Here to Challenge Question No.: 89](#)

Q.No: 89	Which of the following initiative-objective pairings is <b>correctly</b> matched as per Government of India schemes? निम्नलिखित में से कौन सा पहल-उद्देश्य युग्म भारत सरकार की योजनाओं के अनुसार सही ढंग से सुमेलित है?
	UDAN – Road Safety उड़ान – सड़क सुरक्षा
	PM PRANAM – Fertilizer diversification पीएम प्रणाम - उर्वरक विविधीकरण
	NBS – Airline support एनबीएस - एयरलाइन समर्थन
	NSWS – Social welfare एनएसडब्ल्यूएस - सामाजिक कल्याण

[Click Here to Challenge Question No.: 90](#)

Q.No: 90	Which of the following is a typical example of Revenue Expenditure? निम्नलिखित में से कौन सा राजस्व व्यय का एक विशिष्ट उदाहरण है?
	Construction of a railway terminal रेलवे टर्मिनल का निर्माण
	Purchase of land for a PSU facility सार्वजनिक क्षेत्र की कंपनी की सुविधा के लिए भूमि की खरीद
	Interest paid on a government loan सरकारी ऋण पर दिया गया ब्याज
	Funding a national highway project राष्ट्रीय राजमार्ग परियोजना का वित्तपोषण

[Click Here to Challenge Question No.: 91](#)

Q.No: 91	Which of the following statements shows an <b>accurate</b> understanding of a macroeconomic concept? निम्नलिखित में से कौन सा कथन समष्टि आर्थिक अवधारणा की सटीक समझ दर्शाता है?
----------	--

	Gross Domestic Product includes earnings sent home by citizens working abroad. सकल घरेलू उत्पाद में विदेश में काम करने वाले नागरिकों द्वारा घर भेजी गई आय शामिल होती है।	<a href="https://sscstudy.com/">https://sscstudy.com/</a>
	When the general price level rises, the value of money tends to fall. जब सामान्य मूल्य स्तर बढ़ता है, तो धन का मूल्य गिर जाता है।	
	A country's budget is considered balanced when exports exceed imports. किसी देश का बजट तब संतुलित माना जाता है जब निर्यात आयात से अधिक हो।	
	The central bank controls inflation mainly through changes in income tax rates. केंद्रीय बैंक मुख्यतः आयकर दरों में परिवर्तन के माध्यम से मुद्रास्फीति को नियंत्रित करता है।	

<a href="#">Click Here to Challenge Question No.: 92</a>		
Q.No: 92	What is a primary focus area of the Global Energy Transition Index? वैश्विक ऊर्जा संक्रमण सूचकांक का प्राथमिक फोकस क्षेत्र क्या है?	
	Nuclear energy development परमाणु ऊर्जा विकास	
	Fossil fuel production जीवाश्म ईंधन उत्पादन	
	Energy security, sustainability, and equity ऊर्जा सुरक्षा, स्थिरता और समानता	
	Space exploration technology अंतरिक्ष अन्वेषण प्रौद्योगिकी	

<a href="#">Click Here to Challenge Question No.: 93</a>		
Q.No: 93	U Tirot Singh was a tribal chief who led a fierce resistance against the British attempts to build roads through his territory in which region? यू तिरोत सिंग एक आदिवासी मुखिया थे जिन्होंने अपने क्षेत्र से होकर सड़क बनाने के ब्रिटिश प्रयासों के खिलाफ उग्र प्रतिरोध का नेतृत्व किया था?	
	Mizoram Hills मिजोरम हिल्स	
	Naga Hills नागा हिल्स	
	Khasi Hills खासी हिल्स	
	Lushai Hills लुशाई हिल्स	
Not Answered		

<a href="#">Click Here to Challenge Question No.: 94</a>		
Q.No: 94	Bhima Nayak, a prominent tribal leader during the 1857 rebellion, is known for which of the following contributions? 1857 के विद्रोह के दौरान एक प्रमुख आदिवासी नेता भीमा नायक को निम्नलिखित में से किस योगदान के लिए जाना जाता है?	
	Leading tribal uprisings in the Satpura region of Madhya Pradesh and coordinating guerrilla tactics against the British. मध्य प्रदेश के सतपुड़ा क्षेत्र में आदिवासी विद्रोह का नेतृत्व करना और अंग्रेजों के खिलाफ गुरिल्ला रणनीति का समन्वय करना।	
	Negotiating a peace treaty between British authorities and rebel leaders in Central India.	<a href="https://sscstudy.com/">https://sscstudy.com/</a>

	मध्य भारत में ब्रिटिश अधिकारियों और विद्रोही नेताओं के बीच शांति संधि पर बातचीत करना।	<a href="https://sscstudy.com/">https://sscstudy.com/</a>
	Serving as a close aide to Rani Lakshmbai and leading regular army battalions in open warfare. रानी लक्ष्मीबाई के निकट सहयोगी के रूप में सेवा करना तथा खुले युद्ध में नियमित सेना बटालियनों का नेतृत्व करना।	
	Establishing a provisional government in Jhansi during the rebellion. विद्रोह के दौरान झांसी में एक अस्थायी सरकार की स्थापना करना।	

<a href="#">Click Here to Challenge Question No.: 95</a>		
Q.No: 95	Trade policy prior to 1991 was characterized by 1991 से पहले की भारत की व्यापार नीति की विशेषता थी :	
	Free trade मुक्त व्यापार	
	Import liberalization आयात उदारीकरण	
	High tariffs and quotas उच्च टैरिफ और कोटा	
	Foreign direct investment प्रत्यक्ष विदेशी निवेश	

<a href="#">Click Here to Challenge Question No.: 96</a>		
Q.No: 96	Which of the following statements about public sector industries is <b>correct</b> ? सार्वजनिक क्षेत्र के उद्योगों के बारे में निम्नलिखित में से कौन सा कथन <b>सही</b> है?	
	They are owned by private individuals. इनका स्वामित्व निजी व्यक्तियों के पास है।	
	They operate without government regulation. वे सरकारी विनियमन के बिना काम करते हैं।	
	They are owned and operated by government agencies. इनका स्वामित्व और संचालन सरकारी एजेंसियों द्वारा किया जाता है।	
	They are only run in rural areas. वे केवल ग्रामीण क्षेत्रों में ही चलाए जाते हैं।	

<a href="#">Click Here to Challenge Question No.: 97</a>		
Q.No: 97	Read the following Assertion (A) and Reason (R) carefully and choose the <b>correct</b> option. <b>Assertion (A):</b> The Third Five Year Plan failed to meet its targets. <b>Reason (R):</b> The failure was mainly due to external shocks like war and drought. निम्नलिखित अभिकथन (A) और कारण (R) को ध्यानपूर्वक पढ़ें और <b>सही</b> विकल्प चुनें। <b>अभिकथन (A):</b> तीसरी पंचवर्षीय योजना अपने लक्ष्यों को प्राप्त करने में विफल रही। <b>कारण (R):</b> यह विफलता मुख्यतः युद्ध और सूखे जैसे बाहरी झटकों के कारण हुई।	
	Both A and R are true and R is the correct explanation of A. A और R दोनों सत्य हैं और R, A का सही स्पष्टीकरण है।	
	Both A and R are true but R is not the correct explanation of A. A और R दोनों सत्य हैं लेकिन R, A का सही स्पष्टीकरण नहीं है।	
	A is true but R is false. A सत्य है लेकिन R असत्य है।	



A is false but R is true.  
A असत्य है लेकिन R सत्य है।

<https://sscstudy.com/>

[Click Here to Challenge Question No.: 98](#)

Q.No: 98 Read the following Assertion (A) and Reason (R) carefully and choose the **correct** option.  
**Assertion (A):** The Fourth Five Year Plan aimed at growth with stability and self-reliance.  
**Reason (R):** It was launched after the shocks of war and droughts during the previous plan period.

निम्नलिखित अभिकथन (A) और कारण (R) को ध्यानपूर्वक पढ़ें और **सही** विकल्प चुनें।  
**अभिकथन (A):** चौथी पंचवर्षीय योजना का उद्देश्य स्थिरता और आत्मनिर्भरता के साथ विकास करना था।  
**कारण (R):** इसे पिछली योजना अवधि के दौरान युद्ध और सूखे की मार के बाद शुरू किया गया था।

Both A and R are true and R is the correct explanation of A.

A और R दोनों सत्य हैं और R, A का सही स्पष्टीकरण है।

Both A and R are true but R is not the correct explanation of A.

A और R दोनों सत्य हैं लेकिन R, A का सही स्पष्टीकरण नहीं है।

A is true but R is false.

A सत्य है लेकिन R असत्य है।

A is false but R is true.

A असत्य है लेकिन R सत्य है।

[Click Here to Challenge Question No.: 99](#)

Q.No: 99 Consider the following statements about the LIFE (Lifestyle for Environment) initiative:  
1. It was launched by India during COP26.  
2. It emphasizes government regulations over citizen participation.  
3. It promotes sustainable habits such as reusing, reducing, and recycling.

LIFE (पर्यावरण के लिए जीवनशैली) पहल के बारे में निम्नलिखित कथनों पर विचार करें:  
1. इसे भारत द्वारा COP26 के दौरान लॉन्च किया गया था।  
2. यह नागरिक भागीदारी की तुलना में सरकारी नियमों पर ज़ोर देता है।  
3. यह पुनः उपयोग, कम करने और पुनर्चक्रण जैसी स्थायी आदतों को बढ़ावा देता है।

Only 1 and 2 are correct

केवल 1 और 2 सही हैं

Only 1 and 3 are correct

केवल 1 और 3 सही हैं

Only 2 and 3 are correct

केवल 2 और 3 सही हैं

All 1, 2 and 3 are correct

सभी 1, 2 और 3 सही हैं

[Click Here to Challenge Question No.: 100](#)

Q.No: 100 Which of the following was a key feature of financial sector reforms under NEP 1991?  
एनईपी 1991 के तहत वित्तीय क्षेत्र सुधारों की प्रमुख विशेषता निम्नलिखित में से कौन सी थी?

Increased RBI control  
आरबीआई का नियंत्रण बढ़ा

Nationalization of banks  
बैंकों का राष्ट्रीयकरण

<https://sscstudy.com/>

Establishment of private sector banks

<https://sscstudy.com/>

निजी क्षेत्र के बैंकों की स्थापना

Restriction of FDI in banks

बैंकों में एफडीआई पर प्रतिबंध

OnlineGuru

<https://sscstudy.com/>



## CANDIDATE RESPONSE SHEET/GRIEVANCE SYSTEM

[View Your Responses](#)[Click Here to View Grievance Questions](#)Admin loggedin.[ [Logout](#) ]

Roll No.

Exam Level

: 

Test Date

: 09 Dec 2025

Test Time and Shift

: 03:00 PM (Shift-2)

Correct Option selected

Wrong Option selected

Correct Option

Not Answered

[Save / Print](#)**Undertaking by the candidate :**

I acknowledge that this saved question paper is for my personal use and self-analysis only. I understand that sharing, distributing, or using it for commercial or any other purposes is strictly prohibited and may lead to legal action as per applicable acts, rules and regulations.

**Note:**

The candidates may note that in the challenge module the sequence of the questions and the options may be different from how it appeared during the examination. This is because in the challenge module the sequence of the questions as well as the answers will be the same for all the candidates who appeared in a particular shift while during the actual examination these sequences were different for different candidates. However the answer key selected by the candidates during the examination will exactly be reflected in the challenge module.

[Click Here for PART-A](#)[Click Here for PART-B](#)[Click Here for PART-C](#)[Click Here for PART-D](#)**PART-C (Quantitative Aptitude)**[Click Here to Challenge Question No.: 101](#)

Q.No: 101 Solve:  $(56.75)^2 - 3220$   
हल करें:  $(56.75)^2 - 3220$

-0.5625

-0.5625

0.5625

0.5625

2.5625

2.5625

-2.5625

-2.5625

[Click Here to Challenge Question No.: 102](#)

Q.No: 102 A sum of money invested at compound interest amounts to Rs. 1,000 in 3 years and 1,200 in 4 years. Find the rate of interest.  
चक्रवृद्धि ब्याज पर निवेश की गई एक धनराशि 3 वर्षों में 1,000 रुपये और 4 वर्षों में 1,200 रुपये हो जाती है। ब्याज दर ज्ञात कीजिए।

20%

20%



30%	30%
35%	35%
42%	42%

[Click Here to Challenge Question No.: 103](#)

Q.No: 103	A sum becomes Rs. 11,650 in 5 years and Rs. 12,076 in 6 years at simple interest. What is the sum? एक राशि साधारण ब्याज पर 5 वर्षों में 11,650 रुपये और 6 वर्षों में 12,076 रुपये हो जाती है। वह राशि क्या है?
	9,230
	9,230
	9,340
	9,340
	9,420
	9,420
	9,520
	9,520

[Click Here to Challenge Question No.: 104](#)

Q.No: 104	Given: $x + \frac{1}{x} = 2$ , find the value of $x^6 + \frac{1}{x^6} - 3(x^3 + \frac{1}{x^3}) + 5(x^2 + \frac{1}{x^2})$ . दिया गया है: $x + \frac{1}{x} = 2$ , का मान ज्ञात करें $x^6 + \frac{1}{x^6} - 3(x^3 + \frac{1}{x^3}) + 5(x^2 + \frac{1}{x^2})$ .
	2
	2
	4
	4
	6
	6
	8
	8

[Click Here to Challenge Question No.: 105](#)

Q.No: 105	From the summit of a 90-meter-high building, the angles of depression to the top and bottom of a tower are measured at $30^\circ$ and $60^\circ$ , respectively. What is the height of the tower in meters? 90 मीटर ऊँची इमारत के शिखर से, एक मीनार के शीर्ष और तल पर अवनमन कोण क्रमशः $30^\circ$ और $60^\circ$ मापा जाता है। मीटर में मीनार की ऊँचाई कितनी है?
	50m
	50मीटर
	60m
	60मीटर
	70m
	70मीटर
	75m
	75मीटर

[Click Here to Challenge Question No.: 106](#)

Q.No: 106	<p>If the space diagonal of a cuboid is 13 cm, and two of its edges are 3 cm and 4 cm, what is the third edge?</p> <p>यदि एक घनाभ का आंतरिक विकर्ण (स्पेस डायगोनल) 13 सेंटीमीटर है, और इसके दो भुजाएँ क्रमशः 3 सेंटीमीटर और 4 सेंटीमीटर हैं, तो तीसरी भुजा कितनी होगी?</p>
	<p>11 cm</p> <p>11 सेंटीमीटर</p>
	<p>12 cm</p> <p>12 सेंटीमीटर</p>
	<p>13 cm</p> <p>13 सेंटीमीटर</p>
	<p>14 cm</p> <p>14 सेंटीमीटर</p>

[Click Here to Challenge Question No.: 107](#)

Q.No: 107	<p>A solid metal sphere that has a radius of 12 centimeters is melted down and reshaped into smaller spheres, each with a radius of 2 centimeters. How many smaller spheres can be created from this material?</p> <p>12 सेंटीमीटर त्रिज्या वाले एक ठोस धातु के गोले को पिघलाकर 2 सेंटीमीटर त्रिज्या वाले छोटे गोले बनाए जाते हैं। इस पदार्थ से कितने छोटे गोले बनाए जा सकते हैं?</p>
	<p>216</p> <p>216</p>
	<p>6</p> <p>6</p>
	<p>36</p> <p>36</p>
	<p>1728</p> <p>1728</p>

[Click Here to Challenge Question No.: 108](#)

Q.No: 108	<p>A solid metallic sphere of diameter 14 cm is melted and recast into smaller hemispheres each of diameter 7 cm. How many hemispheres can be made?</p> <p>14 सेमी व्यास वाले एक ठोस धातु के गोले को पिघलाकर 7 सेमी व्यास वाले छोटे अर्धगोले बनाए जाते हैं। कितने अर्धगोले बनाए जा सकते हैं?</p>
	<p>16</p> <p>16</p>
	<p>17</p> <p>17</p>
	<p>18</p> <p>18</p>
	<p>19</p> <p>19</p>

[Click Here to Challenge Question No.: 109](#)

Q.No: 109	<p>The proportions of the dimensions of a rectangular parallelepiped are 2:3:4. If its volume is <math>768 \text{ cm}^3</math>, what is its smallest dimension?</p> <p>एक आयताकार समांतर चतुर्भुज की विमाओं का अनुपात 2:3:4 है। यदि इसका आयतन है <math>(768 \text{ सेमी}^3)</math> तो इसका सबसे छोटा विमा क्या है?</p>
	<p>6.34 cm</p> <p>6.34 सेमी</p>
	<p>8.45 cm</p> <p>8.45 सेमी</p>
	<p>12.25 cm</p> <p>12.25 सेमी</p>
	<p>16.89 cm</p> <p>16.89 सेमी</p>
Not Answered	

[Click Here to Challenge Question No.: 110](#)

Q.No: 110	<p>A rectangular tank has a length of 1 meter, a width of 80 cm, and a height of 50 cm. If the tank needs to be covered completely with square tiles of side 20 cm, how many tiles will be required?</p> <p>एक आयताकार टैंक की लंबाई 1 मीटर, चौड़ाई 80 सेमी और ऊँचाई 50 सेमी है। यदि टैंक को 20 सेमी भुजा वाली वर्गाकार टाइलों से पूरी तरह ढकना है, तो कितनी टाइलों की आवश्यकता होगी?</p>
	<p>42</p> <p>42</p>
	<p>85</p> <p>85</p>
	<p>57</p> <p>57</p>
	<p>34</p> <p>34</p>

[Click Here to Challenge Question No.: 111](#)

Q.No: 111	<p>A cone is melted and recast into smaller cones with <math>\frac{1}{3}</math> the radius and <math>\frac{1}{3}</math> the height. How many cones are formed?</p> <p>एक शंकु को पिघलाकर ऐसे छोटे-छोटे शंकुओं में ढाला जाता है जिनकी त्रिज्या और ऊँचाई मूल शंकु की <math>\frac{1}{3}</math> होती है। कुल कितने छोटे शंकु बनाए जा सकते हैं?</p>
	<p>27</p> <p>27</p>
	<p>30</p> <p>30</p>
	<p>32</p> <p>32</p>
	<p>25</p> <p>25</p>

[Click Here to Challenge Question No.: 112](#)

Q.No: 112	<p>A cone is cut by a plane that runs parallel to its base, creating a smaller cone that is similar to the original cone. If the height of this smaller cone is one-third that of the original cone, what is the ratio of their volumes?</p> <p>एक शंकु को उसके आधार के समांतर चलने वाले समतल से काटा जाता है, जिससे एक छोटा शंकु बनता है जो मूल शंकु के समान होता है। यदि इस छोटे शंकु की ऊँचाई मूल शंकु की एक-तिहाई है, तो उनके आयतनों का अनुपात क्या है?</p>
-----------	---

	1 : 3
	1 : 3
	1 : 9
	1 : 9
	1 : 27
	1 : 27
	1 : 6
	1 : 6

[Click Here to Challenge Question No.: 113](#)

Q.No: 113	Expand: $(2x - 3)^2$ विस्तृत करें: $(2x - 3)^2$
	$4x^2 + 12x + 9$ $4x^2 + 12x + 9$
	$4x^2 - 12x + 9$ $4x^2 - 12x + 9$
	$4x^2 - 14x + 10$ $4x^2 - 14x + 10$
	$4x^2 + 10x + 9$ $4x^2 + 10x + 9$

[Click Here to Challenge Question No.: 114](#)

Q.No: 114	A machine processes 2.4 items per second. How many items does it process in $2\frac{1}{2}$ minutes? एक मशीन प्रति सेकंड 2.4 आइटम प्रोसेस करती है। यह $2\frac{1}{2}$ मिनट में यह कितने आइटम प्रोसेस करती है?
	360 360
	380 380
	300 300
	420 420

[Click Here to Challenge Question No.: 115](#)

Q.No: 115	The base of a regular right pyramid is a square with the side length of 6 cm. If its volume is $144\text{ cm}^3$ , what is its height? एक समलंब पिरामिड का आधार एक वर्ग है जिसकी भुजा 6 सेमी है। यदि इसका आयतन $144\text{ सेमी}^3$ है, तो इसकी ऊँचाई क्या है?
	8 cm 8 सेमी
	10 cm 10 सेमी
	12 cm 12 सेमी

15 cm  
15 सेमी

<https://sscstudy.com/>

[Click Here to Challenge Question No.: 116](#)

Q.No: 116 What is the sum of the exterior angles of a polygon with n sides?

n भुजाओं वाले बहुभुज के बाह्य कोणों का योग क्या है?

4π  
4π

5π  
5π

2π  
2π

3π  
3π

[Click Here to Challenge Question No.: 117](#)

Q.No: 117 Simplify:

$$(0.625 \div 2.5) + \left(\frac{5}{8} \times 2\right) = ?$$

सरल करें:

$$(0.625 \div 2.5) + \left(\frac{5}{8} \times 2\right) = ?$$

2.5  
2.5

2  
2

1.5  
1.5

3  
3

[Click Here to Challenge Question No.: 118](#)

Q.No: 118 A regular right pyramid has a square base. Its base area is  $100 \text{ cm}^2$  and its lateral surface area is  $260 \text{ cm}^2$ . What is the height of the pyramid?

एक समलंब पिरामिड का आधार वर्गाकार है। इसका आधार क्षेत्रफल 100 वर्ग सेमी है और पार्श्व पृष्ठीय क्षेत्रफल 260 वर्ग सेमी है। पिरामिड की ऊँचाई कितनी है?

10 cm  
10 सेमी

12 cm  
12 सेमी

13 cm  
13 सेमी

15 cm  
15 सेमी

<https://sscstudy.com/>

Q.No: 119	<p>A water pipe supplies water at a constant rate. In 4.5 minutes, it fills <math>2\frac{1}{4}</math> liters. At this rate, how much time will it take to fill 5.625 liters?</p> <p>एक पानी का पाइप एक निश्चित दर से पानी की आपूर्ति करता है। 4.5 मिनट में, यह <math>2\frac{1}{4}</math> लीटर पानी भरता है। इस दर से, 5.625 लीटर पानी भरने में कितना समय लगेगा?</p>
	<p>10 minutes 10 मिनट</p>
	<p>11.25 minutes 11.25 मिनट</p>
	<p>12 minutes 12 मिनट</p>
	<p>12.5 minutes 12.5 मिनट</p>

Q.No: 120	<p>A farmer uses <math>\frac{2}{3}</math> of his land for wheat and 0.125 for rice. What fraction remains unused?</p> <p>एक किसान अपनी ज़मीन का <math>\frac{2}{3}</math> भाग गेहूँ के लिए और 0.125 भाग चावल के लिए उपयोग करता है। कितना भाग अप्रयुक्त रहता है?</p>
	<p><math>\frac{1}{6}</math> <math>\frac{1}{6}</math></p>
	<p><math>\frac{1}{8}</math> <math>\frac{1}{8}</math></p>
	<p><math>\frac{3}{16}</math> <math>\frac{3}{16}</math></p>
	<p><math>\frac{5}{24}</math> <math>\frac{5}{24}</math></p>

Q.No: 121	Find the area of a circle that has a circumference of 44 cm.	<a href="https://sscstudy.com/">https://sscstudy.com/</a>
-----------	--	---

	एक वृत्त का क्षेत्रफल ज्ञात कीजिए जिसकी परिधि 44 सेंटीमीटर है।	<a href="https://sscstudy.com/">https://sscstudy.com/</a>
	154 cm <sup>2</sup> 154 वर्ग सेंटीमीटर	
	121 cm <sup>2</sup> 121 वर्ग सेंटीमीटर	
	100 cm <sup>2</sup> 100 वर्ग सेंटीमीटर	
	138 cm <sup>2</sup> 138 वर्ग सेंटीमीटर	

[Click Here to Challenge Question No.: 122](#)

Q.No: 122	If the selling price of an item is increased by 25% and the profit also increases from 20% to 30%, what is the percentage increase in the cost price? अगर किसी वस्तु की बिक्री कीमत 25% बढ़ा दिया जाए तथा लाभ भी 20% से बढ़कर 30% हो जाए, तो लागत कीमत में कितने प्रतिशत की वृद्धि होगी?
	4.5% 4.5%
	5.6% 5.6%
	10.28 10.28
	15.38% 15.38%

[Click Here to Challenge Question No.: 123](#)

Q.No: 123	A circular field is surrounded by a path 2 m wide. If the inner radius is 10 m, find the cost to pave the path at ₹20 per m <sup>2</sup> . एक वृत्ताकार मैदान 2 मीटर चौड़े पथ से घिरा हुआ है। यदि आंतरिक त्रिज्या 10 मीटर है, तो ₹20 प्रति वर्ग मीटर की दर से पथ बनाने की लागत ज्ञात कीजिए।
	₹2765.71 ₹2765.71
	₹2654 ₹2654
	₹2356.45 ₹2356.45
	₹3456 ₹3456

[Click Here to Challenge Question No.: 124](#)

Q.No: 124	A square sheet is folded in half. What is the ratio of the area of the folded shape to the original square? एक वर्गाकार शीट को आधे में मोड़ा गया है। मोड़ी गई आकृति के क्षेत्रफल और मूल वर्ग के क्षेत्रफल का अनुपात क्या है?
	1:1 1:1
	1:2 1:2
	2:1 2:1
	3:4

[Click Here to Challenge Question No.: 125](#)

Q.No: 125	A square plot of land is to be expanded such that its area becomes 225% of the original. By what percentage must each side be increased? एक वर्गाकार भूखंड का विस्तार इस प्रकार किया जाना है कि उसका क्षेत्रफल मूल क्षेत्रफल का 225% हो जाए। प्रत्येक भुजा में कितने प्रतिशत की वृद्धि करनी होगी?
	50%
	50%
	100%
	100%
	25%
	25%
	50.5%
	50.5%

[Click Here to Challenge Question No.: 126](#)

Q.No: 126	A square board 20 cm side has a corner triangle removed (right triangle, legs 5 cm each). What percent of the board remains? 20 सेमी भुजा वाले एक वर्गाकार बोर्ड से एक कोने का त्रिभुज हटा दिया गया है (समकोण त्रिभुज, प्रत्येक भुजा 5 सेमी)। बोर्ड का कितना प्रतिशत भाग शेष रह गया है?
	93.76 %
	93.76 %
	92.54%
	92.54%
	96.88 %
	96.88 %
	90 %
	90 %

[Click Here to Challenge Question No.: 127](#)

Q.No: 127	A regular hexagon has an area of $150\text{ cm}^2$ . What is the area of one of its equilateral triangular sections? एक समषट्भुज का क्षेत्रफल 150 वर्ग सेमी है। इसके एक समबाहु त्रिभुजाकार खंड का क्षेत्रफल क्या है?
	$25\text{ cm}^2$
	25 सेमी <sup>2</sup>
	$30\text{ cm}^2$
	30 सेमी <sup>2</sup>
	$35\text{ cm}^2$
	35 सेमी <sup>2</sup>
	$40\text{ cm}^2$
	40 सेमी <sup>2</sup>

[Click Here to Challenge Question No.: 128](#)

Q.No: 128	The average of 20 numbers is 40. If the sum of the first 10 numbers is 380, what is the average of the remaining 10 numbers? <a href="https://sscstudy.com/">https://sscstudy.com/</a>
-----------	---



	20 संख्याओं का औसत 40 है। अगर प्रथम 10 संख्याओं का योग 380 है, तो शेष 10 संख्याओं का औसत क्या है?	<a href="https://sscstudy.com/">https://sscstudy.com/</a>
	42	
	42	
	40	
	40	
	44	
	44	
	38	
	38	

[Click Here to Challenge Question No.: 129](#)

Q.No: 129	A line passes through the point $(2, -1)$ and is perpendicular to the line $y = (-2/5)x + 3$ . What is its equation? एक रेखा बिंदु $(2, -1)$ से होकर गुजरती है और रेखा $y = (-2/5)x + 3$ पर लंबवत है। इसका समीकरण क्या है?
	$y=2x-6$ $y=2x-6$
	$y=(3/2)x-6$ $y=(3/2)x-6$
	$y=(5/2)x-6$ $y=(5/2)x-6$
	$y=(5/2)x-2$ $y=(5/2)x-2$

[Click Here to Challenge Question No.: 130](#)

Q.No: 130	From the top of a lighthouse 100 m high, the angle of depression of a boat is $30^\circ$ . Find the distance of the boat from the base of the lighthouse. 100 मीटर ऊँचे एक लाइटहाउस के शीर्ष से एक नाव का अवनमन कोण $30^\circ$ है। लाइटहाउस के आधार से नाव की दूरी ज्ञात कीजिए।
	78 m 78 मीटर
	173.2 m 173.2 मीटर
	254 m 254 मीटर
	189 m 189 मीटर

[Click Here to Challenge Question No.: 131](#)

Q.No: 131	A cylinder is half-filled with liquid. If radius doubles and height halves, what's the new filled depth percentage-wise? एक बेलन आधा तरल से भरा है। यदि त्रिज्या दोगुनी और ऊँचाई आधी कर दी जाए, तो प्रतिशत के हिसाब से नई भरी हुई गहराई क्या होगी?
	25% 25%
	50% 50%
	75% 75%

Not Answered

[Click Here to Challenge Question No.: 132](#)

Q.No: 132	<p>A composite solid is formed by placing a cone, which has a radius of 2 cm and a height of 6 cm, on top of a right circular cylinder. The cylinder's radius is twice that of the cone, and its height is also double that of the cone. What is the ratio of the volume of the cone to that of the cylinder?</p> <p>एक लंबवृत्तीय बेलन के ऊपर 2 सेमी त्रिज्या और 6 सेमी ऊँचाई वाला एक शंकु रखकर एक मिश्रित ठोस बनाया गया है। बेलन की त्रिज्या शंकु की त्रिज्या की दोगुनी है और उसकी ऊँचाई भी शंकु की त्रिज्या की दोगुनी है। शंकु के आयतन और बेलन के आयतन का अनुपात क्या है?</p>
	1:24
	1:24
	1:12
	1:12
	1:18
	1:18
	1:26
	1:26

[Click Here to Challenge Question No.: 133](#)

Q.No: 133	<p>The volume of a right prism is <math>600 \text{ cm}^3</math> and its base area is <math>30 \text{ cm}^2</math>. Find its height.</p> <p>एक लम्ब प्रिज्म का आयतन <math>600 \text{ सेमी}^3</math> है और इसके आधार का क्षेत्रफल <math>30 \text{ सेमी}^2</math> है। इसकी ऊँचाई ज्ञात कीजिए।</p>
	10 cm
	10 सेमी
	15 cm
	15 सेमी
	20 cm
	20 सेमी
	25 cm
	25 सेमी

[Click Here to Challenge Question No.: 134](#)

Q.No: 134	<p>A triangular prism has side lengths of 5 cm, 6 cm, and 7 cm. If its height is 8 cm, what is the lateral surface area?</p> <p>एक त्रिभुजाकार प्रिज्म की भुजाओं की लंबाई 5 सेमी, 6 सेमी और 7 सेमी है। यदि इसकी ऊँचाई 8 सेमी है, तो पार्श्व पृष्ठीय क्षेत्रफल क्या है?</p>
	$144 \text{ cm}^2$
	144 सेमी <sup>2</sup>
	$120 \text{ cm}^2$
	120 सेमी <sup>2</sup>
	$136 \text{ cm}^2$
	136 सेमी <sup>2</sup>
	$152 \text{ cm}^2$
	152 सेमी <sup>2</sup>

[Click Here to Challenge Question No.: 135](#)

Q.No: 135	If the orthocenter and centroid coincide, the triangle must be: अगर लंबकेन्द्र और केन्द्रक संपाती हों, तो त्रिभुज होगा:	<a href="https://sscstudy.com/">https://sscstudy.com/</a>
	Scalene विषमभुज	
	Right-angled समकोण	
	Equilateral समभुज	
	Isosceles समद्विबाहु	

[Click Here to Challenge Question No.: 136](#)

Q.No: 136	If the radius of a sphere is increased by 30%, by what percentage does its surface area increase? यदि किसी गोले की त्रिज्या 30% बढ़ा दी जाए, तो उसके पृष्ठीय क्षेत्रफल में कितने प्रतिशत की वृद्धि होगी?
	57% 57%
	58% 58%
	69% 69%
	67% 67%

[Click Here to Challenge Question No.: 137](#)

Q.No: 137	If $\tan \theta = \frac{3}{4}$ , what is $\sec \theta$ ? यदि $\tan \theta = \frac{3}{4}$ , तो $\sec \theta$ क्या है?
	$\frac{5}{4}$ $\frac{5}{4}$
	$\frac{11}{5}$ $\frac{11}{5}$
	$\frac{6}{5}$ $\frac{6}{5}$
	$\frac{7}{4}$ $\frac{7}{4}$

[Click Here to Challenge Question No.: 138](#)

Q.No: 138	If $\sin A = \frac{3}{5}$ and $\cos B = \frac{4}{5}$ , and both A, B in first quadrant, then $\sin(A + B) = ?$ यदि $\sin A = \frac{3}{5}$ और $\cos B = \frac{4}{5}$ , और A, B दोनों प्रथम चतुर्थांश में हैं, तो $\sin(A + B) = ?$
-----------	--

$\frac{12}{25}$

$\frac{12}{25}$

$\frac{7}{10}$

$\frac{7}{10}$

$\frac{24}{25}$

$\frac{24}{25}$

$\frac{4}{5}$

$\frac{4}{5}$

[Click Here to Challenge Question No.: 139](#)

Q.No: 139 Find the equation of the line passing through (0,0) and (5,10)  
 (0,0) और (5,10) से होकर जाने वाली रेखा का समीकरण ज्ञात कीजिए

$y = 5x$

$y = 5x$

$y = 3x$

$y = 3x$

$y = 4x$

$y = 4x$

$y = 2x$

$y = 2x$

[Click Here to Challenge Question No.: 140](#)

Q.No: 140 If  $y = mx + c$  passes through (2, 5) and (4, 9), find m  
 यदि  $y = mx + c$  बिन्दु (2, 5) और (4, 9) से होकर गुजरता है, तो m ज्ञात कीजिए

4

4

2

2

3

3

5

5

[Click Here to Challenge Question No.: 141](#)

Q.No: 141 If  $\sec A = \frac{13}{12}$  and A is acute, find  $\sin(90^\circ - A)$ .  
 यदि  $\sec A = \frac{13}{12}$  और A न्यूनकोण है, तो  $\sin(90^\circ - A)$  ज्ञात कीजिए।

$\frac{5}{13}$

$\frac{5}{13}$

$\frac{12}{13}$  $\frac{12}{13}$  $\frac{1}{13}$  $\frac{1}{13}$  $\frac{3}{13}$  $\frac{3}{13}$ [Click Here to Challenge Question No.: 142](#)

Q.No: 142 A triangle has vertices at A(0, 0), B(6, 0), and C(0, 8). What are the coordinates of its Circumcenter?

एक त्रिभुज के शीर्ष A(0, 0), B(6, 0) और C(0, 8) पर हैं। इसके परिकेन्द्र के निर्देशांक क्या हैं?

(4, 3)

(4, 3)

(3, 5)

(3, 5)

(3, 4)

(3, 4)

(4, 5)

(4, 5)

[Click Here to Challenge Question No.: 143](#)

Q.No: 143 In triangle XYZ, a line is drawn parallel to YZ intersecting XZ at A and XY at B. If XA=2cm, AZ=6cm, and XB=3cm, find BY.

त्रिभुज XYZ में, YZ के समान्तर एक रेखा खींची गई है जो XZ को A पर तथा XY को B पर प्रतिच्छेद करती है। यदि XA= 2 सेमी, AZ= 6 सेमी, तथा XB= 3 सेमी है, तो BY ज्ञात कीजिए।

7 cm

7 सेमी

19 cm

19 सेमी

9 cm

9 सेमी

6 cm

6 सेमी

[Click Here to Challenge Question No.: 144](#)Q.No: 144  $55^3 + 17^3 - 72^3 + 201960$  is equal to: $55^3 + 17^3 - 72^3 + 201960$  बराबर है:

0

0

1

1

2

2

[Click Here to Challenge Question No.: 145](#)

Q.No: 145 If  $\tan x = 2$ , find the value of  $\cot(90^\circ - x) + \tan(90^\circ - x)$ .  
यदि  $\tan x = 2$ , तो  $\cot(90^\circ - x) + \tan(90^\circ - x)$  का मान ज्ञात कीजिए.

☒  $\frac{5}{2}$  $\frac{5}{2}$ ☐  $\frac{7}{2}$   
 $\frac{7}{2}$ ☐  $\frac{2}{3}$   
 $\frac{2}{3}$ ☐  $\frac{1}{4}$   
 $\frac{1}{4}$ [Click Here to Challenge Question No.: 146](#)

Q.No: 146 In a circle, chord AB subtends an angle of  $80^\circ$  at the center. What is the measure of the angle subtended by the same chord at any point C on the circumference, on the same side as the arc?  
एक वृत्त में, जीवा AB केंद्र पर  $80^\circ$  का कोण बनाती है। उसी जीवा द्वारा परिधि पर चाप के समान ओर स्थित किसी भी बिंदु C पर बनाए गए कोण का माप क्या है?

☐  $20^\circ$   
 $20^\circ$ ☐  $30^\circ$   
 $30^\circ$ ☒  $40^\circ$   
 $40^\circ$ ☐  $50^\circ$   
 $50^\circ$ [Click Here to Challenge Question No.: 147](#)

Q.No: 147 From a point 13 cm away from the center of a circle, a tangent of length 12 cm is drawn. Find the radius of the circle?  
एक वृत्त के केंद्र से 13 सेमी दूर स्थित एक बिंदु से 12 सेमी लंबाई की एक स्पर्श रेखा खींची गई है। वृत्त की त्रिज्या ज्ञात कीजिए।

☒ 5 cm  
5 सेमी☐ 13 cm  
13 सेमी☐ 7 cm  
7 सेमी☐ 12 cm  
12 सेमी

[Click Here to Challenge Question No.: 148](#)

Q.No: 148	Which of the following is least? $\frac{1}{2}$ , 0.25, 0.3, $\frac{3}{4}$ निम्नलिखित में से कौन सा सबसे कम है? $\frac{1}{2}$ , 0.25, 0.3, $\frac{3}{4}$
	$\frac{1}{2}$ $\frac{1}{2}$
	0.25 0.25
	0.3 0.3
	$\frac{3}{4}$ $\frac{3}{4}$

[Click Here to Challenge Question No.: 149](#)

Q.No: 149	A sum doubles in 10 years at SI. find its Rate of interest एक धनराशि साधारण ब्याज पर 10 वर्षों में दोगुनी हो जाती है। इसकी ब्याज दर ज्ञात कीजिए।
	15% 15%
	20% 20%
	25% 25%
	10% 10%

[Click Here to Challenge Question No.: 150](#)

Q.No: 150	If A works twice as fast as B, and A can complete a task in 10 days, how many days will it take for B to complete the task? अगर A, B से दोगुनी गति से काम करता है, और A किसी कार्य को 10 दिनों में पूरा कर सकता है, तो B को उस कार्य को पूरा करने में कितने दिन लगेंगे?
	50 days 50 दिन
	40 days 40 दिन
	30 days 30 दिन
	20 days 20 दिन



## CANDIDATE RESPONSE SHEET/GRIEVANCE SYSTEM

[View Your Responses](#)[Click Here to View Grievance Questions](#)Admin logged in. [ [Logout](#) ]

Roll No.

Exam Level : 

Test Date : 09 Dec 2025

Test Time and Shift : 01:30 PM (Shift-2)

Correct Option selected Wrong Option selected Correct Option Not Answered[Save / Print](#)**Undertaking by the candidate :**

I acknowledge that this saved question paper is for my personal use and self-analysis only. I understand that sharing, distributing, or using it for commercial or any other purposes is strictly prohibited and may lead to legal action as per applicable acts, rules and regulations.

**Note:**

The candidates may note that in the challenge module the sequence of the questions and the options may be different from how it appeared during the examination. This is because in the challenge module the sequence of the questions as well as the answers will be the same for all the candidates who appeared in a particular shift while during the actual examination these sequences were different for different candidates. However the answer key selected by the candidates during the examination will exactly be reflected in the challenge module.

[Click Here for PART-A](#)[Click Here for PART-B](#)[Click Here for PART-C](#)[Click Here for PART-D](#)**PART-D (English Comprehension)**[Click Here to Challenge Question No.: 151](#)

Q.No: 151	<p>In the following question, a sentence with a blank is given, followed by five words labeled (1), (2), (3), (4), and (5). Choose the word that fills the blank appropriately in the context of the passage.</p> <p>Across centuries, the movement of peoples, whether voluntary or forced, has continually reshaped cultures, economies, and identities. The concept of diaspora (1) ____, not merely the scattering of individuals across lands, but the weaving of complex narratives that transcend borders. Communities living abroad often (2) ____ between preserving ancestral traditions and embracing the customs of their adopted homelands. Language, food, and festivals become linchpins of cultural memory, yet over generations, inevitable transformations (3) ____, blending old and new in unexpected ways. The emotional landscape of the diaspora is often marked by (4) <b>nostalgia</b>, a bittersweet yearning for a homeland that exists both in memory and myth. Meanwhile, some voices within diasporic communities warn against (5) <b>assimilation</b>, fearing that full integration could erode essential aspects of identity.</p> <p>Which verb form fits best? (1)</p>
	denote
	denotes
	denoted
	denoting



Q.No: 152 In the following question, a sentence with a blank is given, followed by five words labeled (1), (2), (3), (4), and (5). Choose the word that fills the blank appropriately in the context of the passage.

Across centuries, the movement of peoples, whether voluntary or forced, has continually reshaped cultures, economies, and identities. The concept of diaspora (1) \_\_\_\_, not merely the scattering of individuals across lands, but the weaving of complex narratives that transcend borders. Communities living abroad often (2) \_\_\_\_ between preserving ancestral traditions and embracing the customs of their adopted homelands. Language, food, and festivals become linchpins of cultural memory, yet over generations, inevitable transformations (3) \_\_\_\_, blending old and new in unexpected ways. The emotional landscape of the diaspora is often marked by (4) **nostalgia**, a bittersweet yearning for a homeland that exists both in memory and myth. Meanwhile, some voices within diasporic communities warn against (5) **assimilation**, fearing that full integration could erode essential aspects of identity.

Choose the right tense/form. (2)

navigates

navigating

navigate

navigated

Q.No: 153 In the following question, a sentence with a blank is given, followed by five words labeled (1), (2), (3), (4), and (5). Choose the word that fills the blank appropriately in the context of the passage.

Across centuries, the movement of peoples, whether voluntary or forced, has continually reshaped cultures, economies, and identities. The concept of diaspora (1) \_\_\_\_, not merely the scattering of individuals across lands, but the weaving of complex narratives that transcend borders. Communities living abroad often (2) \_\_\_\_ between preserving ancestral traditions and embracing the customs of their adopted homelands. Language, food, and festivals become linchpins of cultural memory, yet over generations, inevitable transformations (3) \_\_\_\_, blending old and new in unexpected ways. The emotional landscape of the diaspora is often marked by (4) **nostalgia**, a bittersweet yearning for a homeland that exists both in memory and myth. Meanwhile, some voices within diasporic communities warn against (5) **assimilation**, fearing that full integration could erode essential aspects of identity.

Which modal/tense works best? (3)

will occur

occurs

occurring

occur

Q.No: 154 In the following question, a sentence with a blank is given, followed by five words labeled (1), (2), (3), (4), and (5). Choose the word that fills the blank appropriately in the context of the passage.

Across centuries, the movement of peoples, whether voluntary or forced, has continually reshaped cultures, economies, and identities. The concept of diaspora (1) \_\_\_\_, not merely the scattering of individuals across lands, but the weaving of complex narratives that transcend borders. Communities living abroad often (2) \_\_\_\_ between preserving ancestral traditions and embracing the customs of their adopted homelands. Language, food, and festivals become linchpins of cultural memory, yet over generations, inevitable transformations (3) \_\_\_\_, blending old and new in unexpected ways. The emotional landscape of the diaspora is often marked by (4) **nostalgia**, a bittersweet yearning for a homeland that exists both in memory and myth. Meanwhile, some voices within diasporic communities warn against (5) **assimilation**, fearing that full integration could erode essential aspects of identity.

What does '**nostalgia**' most nearly mean in this context? (4)

	Resentment	<a href="https://sscstudy.com/">https://sscstudy.com/</a>
	Longing	
	Anger	
	Indifference	

[Click Here to Challenge Question No.: 155](#)

Q.No: 155	<p>In the following question, a sentence with a blank is given, followed by five words labeled (1), (2), (3), (4), and (5). Choose the word that fills the blank appropriately in the context of the passage.</p> <p>Across centuries, the movement of peoples, whether voluntary or forced, has continually reshaped cultures, economies, and identities. The concept of diaspora (1) ____, not merely the scattering of individuals across lands, but the weaving of complex narratives that transcend borders. Communities living abroad often (2) ____ between preserving ancestral traditions and embracing the customs of their adopted homelands. Language, food, and festivals become linchpins of cultural memory, yet over generations, inevitable transformations (3) ____, blending old and new in unexpected ways. The emotional landscape of the diaspora is often marked by (4) <b>nostalgia</b>, a bittersweet yearning for a homeland that exists both in memory and myth. Meanwhile, some voices within diasporic communities warn against (5) <b>assimilation</b>, fearing that full integration could erode essential aspects of identity.</p> <p>"Assimilation" most nearly means: (5)</p>
	Preservation
	Segregation
	Absorption
	Rejection

[Click Here to Challenge Question No.: 156](#)

Q.No: 156	<p>Which of the following options, rearrange the given sentences in a proper sequence to make a meaningful passage?</p> <ol style="list-style-type: none"> <li>1. Johann Wolfgang von Goethe is often regarded as one of the most important figures in German literature and thought.</li> <li>2. His "Theory of Colours", challenged Isaac Newton's ideas by arguing that colour is not merely a product of light refraction but also influenced by human perception.</li> <li>3. Goethe was also deeply interested in the sciences and his work in the field of colour theory and plant morphology was groundbreaking in its time.</li> <li>4. Goethe's works, such as the Faust plays, explored themes of human desire, ambition, and the quest for knowledge.</li> <li>5. Goethe also developed the concept of the "Urpflanze" or "primordial plant," suggesting that all plant structures derive from a common, adaptable form.</li> </ol>
	2-4-3-1-5
	1-4-3-2-5
	2-5-4-3-1
	1-5-3-2-4

Q.No: 157	Improve the sentence using the correct phrasal verb of the underlined words. The thieves managed to <u>get off</u> the police during the chase.
<input checked="" type="checkbox"/>	get away from
<input type="checkbox"/>	get along with
<input type="checkbox"/>	get over
<input type="checkbox"/>	get through

Q.No: 158	Benita: I had such a terrible fight with Samira last night. I can't believe what I said. Richard: I don't need to hear all about it. Some things are better left unsaid. What does Richard mean when he says, "Some things are better left unsaid"?
<input checked="" type="checkbox"/>	Some things should remain private and not be spoken about.
<input type="checkbox"/>	Everything should always be openly discussed.
<input type="checkbox"/>	Speaking about problems will always make them worse.
<input type="checkbox"/>	It's best to forget everything after a fight.

Q.No: 159	Identify the error in the sentence. They celebration the win with music and dancing.
<input type="checkbox"/>	win
<input checked="" type="checkbox"/>	celebration
<input type="checkbox"/>	music
<input type="checkbox"/>	dancing

Q.No: 160	Fill in the blank with the correctly spelt word. The scientist was known for her _____ adherence to ethical standards.
<input type="checkbox"/>	unasssailable
<input checked="" type="checkbox"/>	unassailable
<input type="checkbox"/>	unasailable

[Click Here to Challenge Question No.: 161](#)Q.No: 161 Select the most appropriate synonym of the given word: **TRANQUILIZING**☒ Soothing☐ Irritating☐ Provocative☐ Harsh[Click Here to Challenge Question No.: 162](#)Q.No: 162 Select the most appropriate synonym of the given word: **CALUMNY**☐ Truth☒ Slander☐ Praise☐ Compliment[Click Here to Challenge Question No.: 163](#)Q.No: 163 Select the most appropriate antonym of the given word. **Dogmatic**☐ Stubborn☒ Flexible☐ Rigid☐ Arrogant[Click Here to Challenge Question No.: 164](#)Q.No: 164 Select the most appropriate antonym of the given word. **Clandestine**☒ Open☐ Long☐ Secret☐ Boring

Not Answered

Q.No: 165	Select the most appropriate synonym of the given word: <b>DISCONSOLATE</b>
<input checked="" type="checkbox"/>	Unhappy
<input type="checkbox"/>	Cheerful
<input type="checkbox"/>	Content
<input type="checkbox"/>	Elated

Q.No: 166	Select the most appropriate synonym of the given word: <b>EFFRONTERY</b>
<input checked="" type="checkbox"/>	Audacity
<input type="checkbox"/>	Politeness
<input type="checkbox"/>	Shyness
<input type="checkbox"/>	Courtesy

Q.No: 167	Select the most appropriate antonym of the given word. <b>Sanguine</b>
<input type="checkbox"/>	Optimistic
<input type="checkbox"/>	Cheerful
<input checked="" type="checkbox"/>	Pessimistic
<input type="checkbox"/>	Hopeful

Q.No: 168	Select the most appropriate antonym of the given word. <b>Rebarbative</b>
<input checked="" type="checkbox"/>	Attractive
<input type="checkbox"/>	Repulsive
<input type="checkbox"/>	Off-putting
<input type="checkbox"/>	Irritating

Q.No: 169	Choose the correct meaning of idiom: <b>Where the shoe pinches</b>
-----------	---

	The turning point in fortune	<a href="https://sscstudy.com/">https://sscstudy.com/</a>
	The hidden benefit in hardship	
	The point of real difficulty or discomfort	
	The weakest member in a team	

<a href="#">Click Here to Challenge Question No.: 170</a>		
Q.No: 170	Choose the correct meaning of idiom: <b>Rest on his laurels</b>	
	To withdraw from success	
	To bask in past glory and avoid current effort	
	To criticize one's own success	
	To challenge past achievements	

<a href="#">Click Here to Challenge Question No.: 171</a>		
Q.No: 171	Select the <b>correct spelling</b> of a word meaning 'temporary stay or visit'.	
	Sojourn	
	Soejourn	
	Sajourn	
	Sojurn	

<a href="#">Click Here to Challenge Question No.: 172</a>		
Q.No: 172	Spot the <b>correct spelling</b> of a term meaning 'study of the mind'.	
	Sychology	
	Psychology	
	Psychollogy	
	Pscology	

<a href="#">Click Here to Challenge Question No.: 173</a>		
Q.No: 173	Which of these is the <b>correct spelling</b> of an ethical theory prioritizing duty?	
	Deontological	
	Deantological	



	Deontollogical	<a href="https://sscstudy.com/">https://sscstudy.com/</a>
	Deontologicel	

[Click Here to Challenge Question No.: 174](#)

Q.No: 174	Choose the correct <b>one-word substitute</b> for: 'A short, amusing or interesting story about a real incident or person.'
	Tale
	Allegory
	Anecdote
	Biography

[Click Here to Challenge Question No.: 175](#)

Q.No: 175	Choose the correct <b>one-word substitute</b> for: 'A disease that spreads over a whole country or the world'.
	Epidemic
	Endemic
	Pandemic
	Pathogen

[Click Here to Challenge Question No.: 176](#)

Q.No: 176	Spot the <b>correct spelling</b> of a blood-pressure device.
	Sphygmomannometer
	Sphygmomanometer
	Sphygmamanometre
	Sphygmomamometer

[Click Here to Challenge Question No.: 177](#)

Q.No: 177	Choose the correct <b>one-word substitute</b> for: 'A government ruled by the wealthy.'
	Kleptocracy
	Plutocracy
	Theocracy
	Meritocracy

[Click Here to Challenge Question No.: 178](#)

Q.No: 178	<p><b>In the given passage, some words have been deleted. Read the passage intently and choose the most appropriate option to fill in each blank:</b></p> <p>Equity in education is not a matter of distributing identical tools to unequal lives. It is, instead, the <b>(1)</b> _____ of design—one that begins by listening, not prescribing. To mistake uniformity for fairness is to ignore the histories etched into the margins of classrooms: the quiet absence of confidence, the inherited silences of caste, class, or gender, the invisible weight of underfed attention. In this context, merit is often brandished as a <b>(2)</b> _____, obscuring the scaffolded advantages that shape who arrives prepared and who arrives late. A just system does not pretend everyone starts at the same line; it re-draws the line so that the race itself does not entrench inequality. That redrawing requires more than infrastructure—it demands a <b>(3)</b> _____ of imagination. What if assessments accounted for lived complexity? What if pedagogy paused for breath where society gasps for access? Education is not a ladder out of poverty if the rungs are greased for some and splintered for others. Nor is inclusion real if it is merely spatial—a desk, a roll call, a token smile. True equity emerges not from programs alone, but from the <b>(4)</b> _____ to confront whose stories are centred, whose questions are validated, and whose silences are allowed to remain unbroken. The future of learning lies not in acceleration, but in the willingness to <b>(5)</b> _____ where we have failed to ask why the answers always sound the same.</p> <p>What should come in the place of blank number <b>(1)</b>?</p>
	vocabulary
	architecture
	illusion
	burden

[Click Here to Challenge Question No.: 179](#)

Q.No: 179	<p><b>In the given passage, some words have been deleted. Read the passage intently and choose the most appropriate option to fill in each blank:</b></p> <p>Equity in education is not a matter of distributing identical tools to unequal lives. It is, instead, the <b>(1)</b> _____ of design—one that begins by listening, not prescribing. To mistake uniformity for fairness is to ignore the histories etched into the margins of classrooms: the quiet absence of confidence, the inherited silences of caste, class, or gender, the invisible weight of underfed attention. In this context, merit is often brandished as a <b>(2)</b> _____, obscuring the scaffolded advantages that shape who arrives prepared and who arrives late. A just system does not pretend everyone starts at the same line; it re-draws the line so that the race itself does not entrench inequality. That redrawing requires more than infrastructure—it demands a <b>(3)</b> _____ of imagination. What if assessments accounted for lived complexity? What if pedagogy paused for breath where society gasps for access? Education is not a ladder out of poverty if the rungs are greased for some and splintered for others. Nor is inclusion real if it is merely spatial—a desk, a roll call, a token smile. True equity emerges not from programs alone, but from the <b>(4)</b> _____ to confront whose stories are centred, whose questions are validated, and whose silences are allowed to remain unbroken. The future of learning lies not in acceleration, but in the willingness to <b>(5)</b> _____ where we have failed to ask why the answers always sound the same.</p> <p>What should come in the place of blank number <b>(2)</b>?</p>
	shield
	disguise
	mandate
	virtue

[Click Here to Challenge Question No.: 180](#)



Q.No: 180	<p><b>In the given passage, some words have been deleted. Read the passage intently and choose the most appropriate option to fill in each blank:</b></p> <p>Equity in education is not a matter of distributing identical tools to unequal lives. It is, instead, the <b>(1)</b> _____ of design—one that begins by listening, not prescribing. To mistake uniformity for fairness is to ignore the histories etched into the margins of classrooms: the quiet absence of confidence, the inherited silences of caste, class, or gender, the invisible weight of underfed attention. In this context, merit is often brandished as a <b>(2)</b> _____, obscuring the scaffolded advantages that shape who arrives prepared and who arrives late. A just system does not pretend everyone starts at the same line; it re-draws the line so that the race itself does not entrench inequality. That redrawing requires more than infrastructure—it demands a <b>(3)</b> _____ of imagination. What if assessments accounted for lived complexity? What if pedagogy paused for breath where society gasps for access? Education is not a ladder out of poverty if the rungs are greased for some and splintered for others. Nor is inclusion real if it is merely spatial—a desk, a roll call, a token smile. True equity emerges not from programs alone, but from the <b>(4)</b> _____ to confront whose stories are centred, whose questions are validated, and whose silences are allowed to remain unbroken. The future of learning lies not in acceleration, but in the willingness to <b>(5)</b> _____ where we have failed to ask why the answers always sound the same.</p> <p>What should come in the place of blank number <b>(3)</b>?</p>
	reduction
	poverty
	generosity
	rupture

[Click Here to Challenge Question No.: 181](#)

Q.No: 181	<p><b>In the given passage, some words have been deleted. Read the passage intently and choose the most appropriate option to fill in each blank:</b></p> <p>Equity in education is not a matter of distributing identical tools to unequal lives. It is, instead, the <b>(1)</b> _____ of design—one that begins by listening, not prescribing. To mistake uniformity for fairness is to ignore the histories etched into the margins of classrooms: the quiet absence of confidence, the inherited silences of caste, class, or gender, the invisible weight of underfed attention. In this context, merit is often brandished as a <b>(2)</b> _____, obscuring the scaffolded advantages that shape who arrives prepared and who arrives late. A just system does not pretend everyone starts at the same line; it re-draws the line so that the race itself does not entrench inequality. That redrawing requires more than infrastructure—it demands a <b>(3)</b> _____ of imagination. What if assessments accounted for lived complexity? What if pedagogy paused for breath where society gasps for access? Education is not a ladder out of poverty if the rungs are greased for some and splintered for others. Nor is inclusion real if it is merely spatial—a desk, a roll call, a token smile. True equity emerges not from programs alone, but from the <b>(4)</b> _____ to confront whose stories are centred, whose questions are validated, and whose silences are allowed to remain unbroken. The future of learning lies not in acceleration, but in the willingness to <b>(5)</b> _____ where we have failed to ask why the answers always sound the same.</p> <p>What should come in the place of blank number <b>(4)</b>?</p>
	refusal
	curriculum
	hesitation
	mandate

[Click Here to Challenge Question No.: 182](#)

Q.No: 182	<p><b>In the given passage, some words have been deleted. Read the passage intently and choose the most appropriate option to fill in each blank:</b></p> <p>Equity in education is not a matter of distributing identical tools to unequal lives. It is, instead, the <b>(1)</b> _____ of design—one that begins by listening, not prescribing. To mistake uniformity for fairness is to ignore the histories etched into the margins of classrooms: the quiet absence of confidence, the inherited silences of caste, class, or gender, the invisible weight of underfed attention. In this context, merit is often brandished as a <b>(2)</b> _____, obscuring the scaffolded advantages that shape who arrives prepared and who arrives late. A just system does not pretend everyone starts at the same line; it re-draws the line so that the race itself does not entrench inequality. That redrawing requires more than infrastructure—it demands a <b>(3)</b> _____ of imagination. What if assessments accounted for lived complexity? What if pedagogy paused for breath where society gasps for access? Education is not a ladder out of poverty if the rungs are greased for some and splintered for others. Nor is inclusion real if it is merely spatial—a desk, a roll call, a token smile. True equity emerges not from programs alone, but from the <b>(4)</b> _____ to confront whose stories are centred, whose questions are validated, and whose silences are allowed to remain unbroken. The future of learning lies not in acceleration, but in the willingness to <b>(5)</b> _____ where we have failed to ask why the answers always sound the same.</p> <p>What should come in the place of blank number <b>(5)</b>?</p>
	innovate
	conform
	return
	unravel

[Click Here to Challenge Question No.: 183](#)

Q.No: 183	<p><b>Choose the correct preposition:</b></p> <p>He was entrusted _____ confidential state documents.</p>
	for
	with
	to
	by

[Click Here to Challenge Question No.: 184](#)

Q.No: 184	<p><b>Select the correct option:</b></p> <p>The committee regarded the proposal as ___ to the organization's long-term vision.</p>
	integral
	integrally
	integration
	integrate

[Click Here to Challenge Question No.: 185](#)

Q.No: 185	<p><b>Find the part of the sentence that contains an error:</b></p> <p>The manager asked the interns (1)/ to compile the data accurately and quick (2)/ for tomorrow's presentation (3)/ before the end of the day. (4)/</p>
	(1)

(2)

(3)

(4)

[Click Here to Challenge Question No.: 186](#)

Q.No: 186

**Find the part of the sentence that contains an error:**

What the council could not anticipate (1)/ was that the regulatory changes, sudden as they seemed, (2)/ were in fact a culmination of several years (3)/ of there being dissatisfaction within the sector. (4)

(1)

(2)

(3)

(4)

[Click Here to Challenge Question No.: 187](#)

Q.No: 187

**Change the following from active to passive:**

They will not tolerate procedural anomalies.

Procedural anomalies will not be tolerated by them.

Procedural anomalies are not being tolerated by them.

Procedural anomalies would not be tolerated by them.

Procedural anomalies have not been tolerated by them.

[Click Here to Challenge Question No.: 188](#)

Q.No: 188

**Change the following from active to passive:**

People found her explanation lacking in coherence.

Her explanation lacked coherence when people found it.

It was found by people that her explanation lacked coherence.

Her explanation was found to be lacking in coherence.

Her coherence was lacking when it was explained.

[Click Here to Challenge Question No.: 189](#)

Q.No: 189

**Select the sentence containing the homonym of the highlighted word:**

He had a strong **will** to overcome adversity.

They signed a will before retirement.

The king ruled with willful pride.

She was willing to help without reward.

The team showed great willpower.

[Click Here to Challenge Question No.: 190](#)

Q.No: 190 **Select the sentence containing the homonym of the highlighted word:**  
The conservator repaired the **fillet** on the old manuscript binding.

The chef pan-seared a salmon fillet with herbs.

The bookbinder stitched the leather fillet tightly.

The fillet was traced in gold on the spine.

The medieval fillet indicated title divisions.

[Click Here to Challenge Question No.: 191](#)

Q.No: 191 **Select the sentence containing the homonym of the highlighted word:**  
The illuminator **antiphony** contained Advent chants.

The singer read directly from the antiphony.

The musicologist translated a medieval antiphony.

The engineer downloaded an antiphony for circuit patterns.

The archivist restored the parchment antiphony.

[Click Here to Challenge Question No.: 192](#)

Q.No: 192 **Convert the sentence provided below from its passive voice structure to an active voice structure:**  
A complaint was filed against the director by the shareholders.

The shareholders had filed a complaint against the director.

The shareholders were filing a complaint against the director.

The shareholders filed a complaint against the director.

The director complained to the shareholders.

[Click Here to Challenge Question No.: 193](#)

Q.No: 193 **Convert the sentence provided below from its passive voice structure to an active voice structure:**  
The documents have been being reviewed by the compliance team for several weeks.

	The compliance team has reviewed the documents for weeks.	<a href="https://sscstudy.com/">https://sscstudy.com/</a>
	The compliance team has been reviewing the documents for several weeks.	
	The documents were being reviewed for several weeks.	
	The compliance team had reviewed the documents weekly.	

<a href="#">Click Here to Challenge Question No.: 194</a>		
Q.No: 194	Choose the most suitable option to replace the highlighted part of the sentence: <b>Neither Rina or Raju</b> was present in the class.	
	Neither Rina not Raju	
	Either Rina or Raju	
	None of Rina and Raju	
	Neither Rina nor Raju	

<a href="#">Click Here to Challenge Question No.: 195</a>		
Q.No: 195	Choose the most suitable option to replace the highlighted part of the sentence: The teacher explained the topic <b>so clearly that no one had doubts</b> .	
	very clearly that no one had doubts	
	so clearly that no one had any doubts	
	in such clear way that no doubt remained	
	clearly so that no doubts were there	

<a href="#">Click Here to Challenge Question No.: 196</a>		
Q.No: 196	<b>A sentence is provided in indirect speech. From the four given options, choose the one that most accurately conveys the sentence in its corresponding direct speech.</b> She observed that the appellate bench might overturn the ruling were new exculpatory evidence to surface.	
	She observed, "The appellate bench may overturn the ruling if new exculpatory evidence surfaces."	
	She said, "The appellate bench might overturn the ruling were new exculpatory evidence to surface."	
	She observed, "Should new exculpatory evidence surface, the bench has overturned the ruling."	
	She said, "Evidence surfaces, ruling might overturn."	

<a href="#">Click Here to Challenge Question No.: 197</a>		
<a href="https://sscstudy.com/">https://sscstudy.com/</a>		



Q.No: 197	<b>A sentence is provided in direct speech. From the four given options, choose the one that most accurately conveys the sentence in its corresponding indirect speech.</b> She said, "I was going to the market."
<input checked="" type="checkbox"/>	She said that she had been going to the market.
<input type="checkbox"/>	She said she was gone to the market.
<input type="checkbox"/>	She said she is going to the market.
<input type="checkbox"/>	She said she had gone to the market.

[Click Here to Challenge Question No.: 198](#)

Q.No: 198	<b>A sentence is provided in indirect speech. From the four given options, choose the one that most accurately conveys the sentence in its corresponding direct speech.</b> The trainer remarked that participants must arrive 15 minutes early for registration.
<input type="checkbox"/>	"Participants had to come 15 minutes early for registration," the trainer remarked.
<input checked="" type="checkbox"/>	"Arrive 15 minutes early for registration," the trainer told the participants.
<input type="checkbox"/>	"You will be registered only if you arrive 15 minutes early," said the trainer.
<input type="checkbox"/>	"It's mandatory to register before 15 minutes," said the trainer.

[Click Here to Challenge Question No.: 199](#)

Q.No: 199	<b>Rearrange the following sentences to form a meaningful passage:</b> 1. Philosophical scepticism questions whether knowledge is possible. 2. This position originated in ancient Greek thought. 3. Later, it influenced Enlightenment thinkers. 4. Its legacy persists in modern epistemology.
<input checked="" type="checkbox"/>	1-3-2-4
<input type="checkbox"/>	2-1-3-4
<input type="checkbox"/>	2-4-3-1
<input checked="" type="checkbox"/>	1-2-3-4

[Click Here to Challenge Question No.: 200](#)

Q.No: 200	<b>Rearrange the following sentences in correct order to make a logical passage.</b> 1. However, it requires careful planning and execution. 2. Launching a new product can be an exciting venture. 3. Market research is the first crucial step to ensure success. 4. This helps in understanding customer needs and competitive landscape.
<input type="checkbox"/>	2-4-1-3
<input checked="" type="checkbox"/>	2-1-3-4
<input type="checkbox"/>	4-3-1-2
<input type="checkbox"/>	2-3-1-4