

Multi Tasking Non Technical Staff and Havaladar CBIC and CBN Examination 2023

Roll Number	
Candidate Name	
Venue Name	iON Digital Zone iDZ 1 Patia
Exam Date	06/09/2023
Exam Time	12:30 PM - 2:30 PM
Subject	MTS Non Tech Havaladar CBIC and CBN Examination 2023

Section : Numerical and Mathematical Ability

Q.1 Pradeep is twice as good as Sandeep to complete a work. Working together, they can finish a piece of work in 28 days. In how many day can Pradeep alone finish the work?

- Ans
- ☒ 1. 46
 - ☒ 2. 40
 - ☒ 3. 44
 - ☒ 4. 42

Question ID : 264330156235

Option 1 ID : 264330612342

Option 2 ID : 264330612339

Option 3 ID : 264330612341

Option 4 ID : 264330612340

Status : Answered

Chosen Option : 4

Q.2 A table showing the percentages of the total population of a town by age groups for the year 2016 is given below.

Age Group (in years)	Per cent
up to 15	35
16-30	18.5
30-40	12.5
40-50	25.77
51 and above	8.23

There are 2200 billion people below 40 years. How many billion people are in the age group 40-50?

- Ans
- ☒ 1. 417
 - ☒ 2. 1167
 - ☒ 3. 274
 - ☒ 4. 859

Question ID : 264330153887

Option 1 ID : 264330603012

Option 2 ID : 264330603014

Option 3 ID : 264330603013

Option 4 ID : 264330603011

Status : Answered

Chosen Option : 4

Q.3 Two containers of equal capacity are full of a mixture of milk and water. In the first container, the ratio of milk to water is 3 : 11 and in the second container the ratio is 9 : 11. If both the mixtures are mixed in a container, what is the resulting ratio of milk to water?

- Ans**
- ☐ 1. 87 : 197
 - ☐ 2. 21 : 87
 - ☒ 3. 93 : 187
 - ☐ 4. 93 : 179

Question ID : 264330154078

Option 1 ID : 264330603777

Option 2 ID : 264330603775

Option 3 ID : 264330603778

Option 4 ID : 264330603776

Status : Answered

Chosen Option : 3

Q.4 In ABC club, 88% members are men and 12% members are women. If the average age of the men is 25 years and that of the women is 50 years, then what is the average age of all the members?

- Ans**
- ☐ 1. 27
 - ☒ 2. 28
 - ☐ 3. 26
 - ☐ 4. 29

Question ID : 264330156211

Option 1 ID : 264330612244

Option 2 ID : 264330612245

Option 3 ID : 264330612243

Option 4 ID : 264330612246

Status : Answered

Chosen Option : 2

Q.5 A is 25% more than B, and B is 40% less than C. If C is 20% more than D, then by what percentage is A less than D?

- Ans**
- ☐ 1. 12%
 - ☐ 2. 5%
 - ☐ 3. 15%
 - ☒ 4. 10%

Question ID : 264330156515

Option 1 ID : 264330613450

Option 2 ID : 264330613447

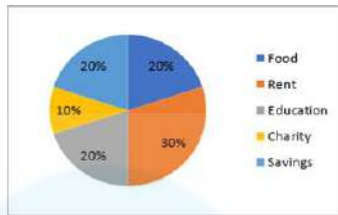
Option 3 ID : 264330613448

Option 4 ID : 264330613449

Status : Answered

Chosen Option : 4

Q.6 The following pie chart gives the monthly budget of a family on the heads - Food, Rent, Education, Charity and Savings. The total income of the family is ₹9,000. Study the pie chart carefully and answer the question.



What is the total expenditure on the heads - rent, savings, food and education?

- Ans**
- ☒ 1. ₹8,200
 - ☒ 2. ₹8,100
 - ☒ 3. ₹6,300
 - ☒ 4. ₹6,500

Question ID : 264330153859

Option 1 ID : 264330602899

Option 2 ID : 264330602902

Option 3 ID : 264330602901

Option 4 ID : 264330602900

Status : Answered

Chosen Option : 2

Q.7 Two tankers contain 850 litres and 680 litres of oil. Find the maximum capacity of a container which can measure the oil of both tankers when used, an exact number of times.

- Ans**
- ☒ 1. 425 litres
 - ☒ 2. 680 litres
 - ☒ 3. 340 litres
 - ☒ 4. 170 litres

Question ID : 264330155982

Option 1 ID : 264330611327

Option 2 ID : 264330611329

Option 3 ID : 264330611328

Option 4 ID : 264330611330

Status : Answered

Chosen Option : 4

Q.8 Find the mean proportional between 56 and 14.

- Ans**
- ☒ 1. 42
 - ☒ 2. 14
 - ☒ 3. 35
 - ☒ 4. 28

Question ID : 264330153877

Option 1 ID : 264330602974

Option 2 ID : 264330602971

Option 3 ID : 264330602972

Option 4 ID : 264330602973

Status : Answered

Chosen Option : 4

Q.9 A and B can finish a work in $5\frac{1}{3}$ days. A alone can finish this work in 8 days. A and B worked on alternate days (starting with B) to finish this work. In how many days will the work be finished?

- Ans**
- ☒ 1. 6 days
 - ☒ 2. $11\frac{1}{3}$ days
 - ☒ 3. 11 days
 - ☒ 4. $6\frac{1}{3}$ days

Question ID : 264330154135

Option 1 ID : 264330604003

Option 2 ID : 264330604005

Option 3 ID : 264330604004

Option 4 ID : 264330604006

Status : Answered

Chosen Option : 1

Q.10 The selling price of 10 articles is equal to the cost price of 13 articles. What is the gain percentage?

- Ans**
- ☒ 1. 30%
 - ☒ 2. 25%
 - ☒ 3. 20%
 - ☒ 4. 40%

Question ID : 264330156518

Option 1 ID : 264330613460

Option 2 ID : 264330613462

Option 3 ID : 264330613459

Option 4 ID : 264330613461

Status : Answered

Chosen Option : 1

Q.11 The simple interest on a certain sum for 4 years at the rate of 15% p.a. is ₹4,500 less than the simple interest on the same sum for 6 years at the same rate of interest. Find the sum.

- Ans**
- ☒ 1. ₹12,000
 - ☒ 2. ₹13,000
 - ☒ 3. ₹15,000
 - ☒ 4. ₹14,000

Question ID : 264330156227

Option 1 ID : 264330612307

Option 2 ID : 264330612308

Option 3 ID : 264330612310

Option 4 ID : 264330612309

Status : Answered

Chosen Option : 3

Q.12 The average of four consecutive odd numbers is 58. What is the lowest number?

- Ans
- ☐ 1. 51
 - ☐ 2. 57
 - ☒ 3. 55
 - ☐ 4. 53

Question ID : 264330156252

Option 1 ID : 264330612407

Option 2 ID : 264330612410

Option 3 ID : 264330612409

Option 4 ID : 264330612408

Status : Answered

Chosen Option : 3

Q.13 At what rate per annum will a sum of ₹6,400 fetch a compound interest (Compounded annually) of ₹1,344 in 2 years?

- Ans
- ☒ 1. 10%
 - ☐ 2. 8%
 - ☐ 3. 12%
 - ☐ 4. 5%

Question ID : 264330154130

Option 1 ID : 264330603983

Option 2 ID : 264330603985

Option 3 ID : 264330603984

Option 4 ID : 264330603986

Status : Answered

Chosen Option : 1

Q.14 If $p : q = 5 : 2$, then $p^2 - q^2 : p^2 + q^2 = ?$

- Ans
- ☐ 1. 29 : 21
 - ☐ 2. 4 : 3
 - ☐ 3. 3 : 4
 - ☒ 4. 21 : 29

Question ID : 264330154126

Option 1 ID : 264330603968

Option 2 ID : 264330603970

Option 3 ID : 264330603969

Option 4 ID : 264330603967

Status : Answered

Chosen Option : 4

Q.15 Simplify the following.

$$15 \div 5 \text{ of } 3 \times 4 + 8 \div 12 \text{ of } 4 \times 12 - 4 \div 5 \times 20$$

Ans

☐ 1. $\frac{20}{3}$

☒ 2. -10

☐ 3. 12

☐ 4. 1

Question ID : 264330158196

Option 1 ID : 264330620144

Option 2 ID : 264330620143

Option 3 ID : 264330620146

Option 4 ID : 264330620145

Status : Answered

Chosen Option : 2

Q.16 A man takes 30 minutes to cover a certain distance at the speed of 8 km/h. If he walks at a speed of 16 km/h, he covers the same distance in:

Ans

☒ 1. 15 minutes

☐ 2. 30 minutes

☐ 3. 25 minutes

☐ 4. 20 minutes

Question ID : 264330156232

Option 1 ID : 264330612327

Option 2 ID : 264330612330

Option 3 ID : 264330612329

Option 4 ID : 264330612328

Status : Answered

Chosen Option : 1

Q.17 Metallic spheres of radii 6 cm, 8 cm and 10 cm, respectively, are melted to form a single solid sphere. Find the radius of the resulting sphere (in cm).

Ans

☐ 1. 18

☒ 2. 12

☐ 3. 24

☐ 4. 16

Question ID : 264330153865

Option 1 ID : 264330602926

Option 2 ID : 264330602923

Option 3 ID : 264330602924

Option 4 ID : 264330602925

Status : Answered

Chosen Option : 2

Q.18 Each edge of a cube is increased by 30%. What will be the increase in its surface area?

- Ans**
- ☒ 1. 90%
 - ☒ 2. 60%
 - ☒ 3. 30%
 - ☒ 4. 69%

Question ID : 264330154070

Option 1 ID : 264330603745

Option 2 ID : 264330603743

Option 3 ID : 264330603746

Option 4 ID : 264330603744

Status : Answered

Chosen Option : 4

Q.19 If there is a profit of 25% on the cost price of an article, the percentage of profit calculated on its selling price will be:

- Ans**
- ☒ 1. 20%
 - ☒ 2. 15%
 - ☒ 3. 18%
 - ☒ 4. 22%

Question ID : 264330155961

Option 1 ID : 264330611244

Option 2 ID : 264330611245

Option 3 ID : 264330611246

Option 4 ID : 264330611243

Status : Answered

Chosen Option : 1

Q.20 Trains A and B start at the same time. Train A travels at the speed of 50 km/h from station P to station Q and train B travels at the speed of 70 km/h from station Q to station P. They cross each other after 1 hour 20 minutes. What is the distance (in km) between station P and station Q?

- Ans**
- ☒ 1. 180
 - ☒ 2. 150
 - ☒ 3. 140
 - ☒ 4. 160

Question ID : 264330155970

Option 1 ID : 264330611281

Option 2 ID : 264330611282

Option 3 ID : 264330611279

Option 4 ID : 264330611280

Status : Answered

Chosen Option : 4

Q.1 21 is related to 86 following a certain logic. Following the same logic, 33 is related to 134. To which of the following is 25 related to, following the same logic?

- Ans**
- ☒ 1. 100
 - ☒ 2. 103
 - ☒ 3. 102
 - ☒ 4. 101

Question ID : **264330151580**
Option 1 ID : **264330593947**
Option 2 ID : **264330593950**
Option 3 ID : **264330593949**
Option 4 ID : **264330593948**
Status : **Answered**
Chosen Option : **3**

Q.2 If G means '-', A means '×', D means '+', B means '÷', then what will come in place of the question mark (?) in the following equation?

12 A 7 G 100 D 5 B 17 = ?

- Ans**
- ☒ 1. 74
 - ☒ 2. 93
 - ☒ 3. 81
 - ☒ 4. 37

Question ID : **264330154687**
Option 1 ID : **264330606211**
Option 2 ID : **264330606214**
Option 3 ID : **264330606212**
Option 4 ID : **264330606213**
Status : **Answered**
Chosen Option : **3**

Q.3 What should come in place of ? in the given series?

26 39 52 65 ? 91 104

- Ans**
- ☒ 1. 78
 - ☒ 2. 79
 - ☒ 3. 81
 - ☒ 4. 80

Question ID : **264330151542**
Option 1 ID : **264330593795**
Option 2 ID : **264330593796**
Option 3 ID : **264330593798**
Option 4 ID : **264330593797**
Status : **Answered**
Chosen Option : **1**

Q.4 In a certain code language, 'BLAME' is coded as 'CMBNF' and 'CHANGE' is coded as 'DIBOHF'. What is the code for 'DESERT' in the given code language?

- Ans**
- ☐ 1. EGTGSV
 - ☐ 2. FHSGTV
 - ☒ 3. EFTFSU
 - ☐ 4. FGRFST

Question ID : 264330155808

Option 1 ID : 264330610635

Option 2 ID : 264330610636

Option 3 ID : 264330610638

Option 4 ID : 264330610637

Status : Answered

Chosen Option : 3

Q.5 Read the given statement(s) and conclusions carefully. Assuming that the information given in the statements is true, even if it appears to be at variance with commonly known facts, decide which of the given conclusions logically follow(s) from the statement(s).

Statements: Some dogs are bats. Some bats are cats

Conclusions:

(I) Some dogs are cats.

(II) Some cats are dogs.

- Ans**
- ☐ 1. Both conclusions (I) and (II) are follows.
 - ☐ 2. Only conclusion (II) is follows.
 - ☒ 3. Neither conclusion (I) nor (II) is follows.
 - ☐ 4. Only conclusion (I) is follows.

Question ID : 264330154428

Option 1 ID : 264330605178

Option 2 ID : 264330605176

Option 3 ID : 264330605177

Option 4 ID : 264330605175

Status : Answered

Chosen Option : 3

Q.6 Read the given statements and conclusions carefully. You have to take the given statements to be true even if they seem to be at variance from commonly known facts. You have to decide which conclusion/s logically follow/s from the given statements.

Statements: Some paints are cats. All cats are dogs. Some dogs are bananas.

Conclusion I: Some paints are dogs.

Conclusion II: Some cats are bananas.

- Ans**
- ☐ 1. Neither conclusion (I) nor (II) is follow.
 - ☐ 2. Both conclusions (I) and (II) are follow.
 - ☒ 3. Only conclusion (I) is follow.
 - ☐ 4. Only conclusion (II) is follow.

Question ID : 264330155917

Option 1 ID : 264330611073

Option 2 ID : 264330611074

Option 3 ID : 264330611071

Option 4 ID : 264330611072

Status : Answered

Chosen Option : 3

Q.7 What should come in place of '?' in the given series?

7 28 91 280 ? 2548 7651

- Ans
- ☒ 1. 823
 - ☒ 2. 871
 - ☒ 3. 861
 - ☒ 4. 847

Question ID : 264330151484

Option 1 ID : 264330593563

Option 2 ID : 264330593566

Option 3 ID : 264330593565

Option 4 ID : 264330593564

Status : Answered

Chosen Option : 4

Q.8 What will come in the place of the question mark (?) in the following equation, if '+' and '-' are interchanged and '×' and '÷' are interchanged?
 $3 + 5 + 8 - 505 \times 5 = ?$

- Ans
- ☒ 1. 106
 - ☒ 2. 102
 - ☒ 3. 104
 - ☒ 4. 108

Question ID : 264330154615

Option 1 ID : 264330605925

Option 2 ID : 264330605923

Option 3 ID : 264330605924

Option 4 ID : 264330605926

Status : Answered

Chosen Option : 4


Q.9 Which figure should replace the question mark (?) if the following figure series were to be continued?


D				L			△		3			?
N	L	P	P	D	△	L	3	P	P	△	N	
3		△	N		3	D		N	L		D	


Ans

✓ 1.

	N	
3	D	P
△		L

2. 

3. 

4. 

Question ID : 264330154756

Option 1 ID : 264330606488

Option 2 ID : 264330606487

Option 3 ID : 264330606490

Option 4 ID : 264330606489

Status: **Not Attempted and Marked For Review**

Chosen Option : --

Q.10

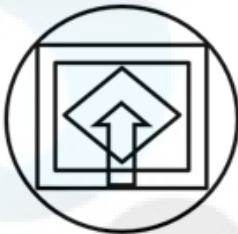
Select the option figure in which the given figure (X) is embedded as its part (rotation is NOT allowed).



(X)

Ans

✗ 1.



✓ 2.



✗ 3.



✗ 4.



Question ID : 264330151724

Option 1 ID : 264330594523

Option 2 ID : 264330594525

Option 3 ID : 264330594526

Option 4 ID : 264330594524

Status : Answered

Chosen Option : 2

Q.11 What should come in place of '?' in the given series?

11 39 123 375 1131 ?

Ans ☒ 1. 3399

☐ 2. 3499

☐ 3. 3187

☐ 4. 3417

Question ID : 264330151458

Option 1 ID : 264330593460

Option 2 ID : 264330593462

Option 3 ID : 264330593459

Option 4 ID : 264330593461

Status : Answered

Chosen Option : 1

Q.12 What should come in place of ? in the given series based on the English alphabetical order?

ESP, CRN, AQL, YPJ, ?

Ans ☐ 1. YMG

☐ 2. YNI

☒ 3. WOH

☐ 4. ZNG

Question ID : 264330155788

Option 1 ID : 264330610556

Option 2 ID : 264330610555

Option 3 ID : 264330610557

Option 4 ID : 264330610558

Status : Answered

Chosen Option : 3

Q.13 Select the combination of letters that when sequentially placed in the blanks of the given series, will complete the series.

A _ AA _ _ AD _ _ DA

Ans ☐ 1. AADDA

☒ 2. DDAAA

☐ 3. ADDAD

☐ 4. DAADD

Question ID : 264330151638

Option 1 ID : 264330594179

Option 2 ID : 264330594180

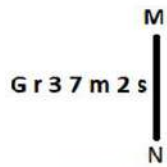
Option 3 ID : 264330594181

Option 4 ID : 264330594182

Status : Not Attempted and
Marked For Review

Chosen Option : --

Q.14 Select the correct mirror image of the given figure when the mirror is placed at MN as shown below.



- Ans
- ☒ 1. 22 w 7 E 1 0
 - ☒ 2. 2 5 m 7 E 1 G
 - ☒ 3. 2 5 m 7 E 1 0
 - ☒ 4. 2 s m 7 E 1 0

Question ID : 264330151529

Option 1 ID : 264330593744

Option 2 ID : 264330593745

Option 3 ID : 264330593746

Option 4 ID : 264330593743

Status : Answered

Chosen Option : 3

Q.15 Seven people, C, F, D, K, O, L, and V are sitting in a straight line, facing south. V sits second to the right of F. Only three people sit to the right of O. K is an immediate neighbour of O and D. Only three people sit between L and V. F is not an immediate neighbour of L.

Who sits to the extreme left of the line?

- Ans
- ☒ 1. C
 - ☒ 2. F
 - ☒ 3. V
 - ☒ 4. D

Question ID : 264330161698

Option 1 ID : 264330634121

Option 2 ID : 264330634120

Option 3 ID : 264330634122

Option 4 ID : 264330634119

Status : Not Attempted and Marked For Review

Chosen Option : --

Q.16 The position of how many letters will remain unchanged if each of the letter in the word 'GRAPES' is arranged in alphabetical order?

- Ans
- ☒ 1. One
 - ☒ 2. None
 - ☒ 3. Four
 - ☒ 4. Two

Question ID : 264330154321

Option 1 ID : 264330604750

Option 2 ID : 264330604748

Option 3 ID : 264330604747

Option 4 ID : 264330604749

Status : Answered

Chosen Option : 4

Q.17 In a certain code language, 'WHAT' is coded as 5298 and 'THAN' is coded as 9826. What is the code for 'W' in the given code language?

- Ans**
- ☒ 1. 8
 - ☒ 2. 5
 - ☒ 3. 2
 - ☒ 4. 6

Question ID : 264330155869

Option 1 ID : 264330610880

Option 2 ID : 264330610882

Option 3 ID : 264330610879

Option 4 ID : 264330610881

Status : Answered

Chosen Option : 2

Q.18 BJTI is related to EMWL in a certain way based on the English alphabetical order. In the same way, HDRL is related to KGUO. To which of the following is OCGM related to, following the same logic?

- Ans**
- ☒ 1. RFIO
 - ☒ 2. SEKO
 - ☒ 3. RFJP
 - ☒ 4. QEIR

Question ID : 264330151668

Option 1 ID : 264330594302

Option 2 ID : 264330594301

Option 3 ID : 264330594300

Option 4 ID : 264330594299

Status : Answered

Chosen Option : 3

Q.19 Select the set in which the numbers are related in the same way as are the numbers of the following sets.

(NOTE : Operations should be performed on the whole numbers, without breaking down the numbers into its constituent digits. E.g. 13 – Operations on 13 such as adding / subtracting / multiplying etc. to 13 can be performed. Breaking down 13 into 1 and 3 and then performing mathematical operations on 1 and 3 is not allowed)

(14, 13, 32)

(21, 13, 39)

- Ans**
- ☒ 1. 15, 7, 18
 - ☒ 2. 19, 12, 36
 - ☒ 3. 5, 19, 88
 - ☒ 4. 11, 14, 43

Question ID : 264330151609

Option 1 ID : 264330594066

Option 2 ID : 264330594064

Option 3 ID : 264330594065

Option 4 ID : 264330594063

Status : Answered

Chosen Option : 2

Q.20 What should come in place of ? in the given series based on the English alphabetical order?

NBX, MEW, LHV, KKV, ?

- Ans**
- ☒ 1. HMS
 - ☒ 2. JNT
 - ☒ 3. IMR
 - ☒ 4. HNS

Question ID : 264330155792

Option 1 ID : 264330610571

Option 2 ID : 264330610572

Option 3 ID : 264330610573

Option 4 ID : 264330610574

Status : Answered

Chosen Option : 2

Section : General Awareness

Q.1 Who inaugurated the 2023 World Squash Championships that was held in India?

- Ans**
- ☒ 1. KN Nehru
 - ☒ 2. K Ponmudi
 - ☒ 3. EV Velu
 - ☒ 4. Udhayanidhi Stalin

Question ID : 264330161128

Option 1 ID : 264330631843

Option 2 ID : 264330631846

Option 3 ID : 264330631845

Option 4 ID : 264330631844

Status : Marked For Review

Chosen Option : 4

Q.2 Who among the following is primarily regarded as a maestro of Hindustani classical music?

- Ans**
- ☒ 1. Bade Ghulam Ali Khan
 - ☒ 2. Mavelikkara Prabhakara Varma
 - ☒ 3. Sampagodu Vighnaraja
 - ☒ 4. Sai Vignesh

Question ID : 264330155473

Option 1 ID : 264330609295

Option 2 ID : 264330609296

Option 3 ID : 264330609297

Option 4 ID : 264330609298

Status : Answered

Chosen Option : 1

Q.3 What is 'Mahawat' in India?

- Ans
- ☐ 1. Cold waves during the winter season
 - ☐ 2. Cloud burst during the monsoon season
 - ☒ 3. Cyclonic rainfall during the winter season
 - ☐ 4. Hot and dry winds during the summer season

Question ID : 264330161521

Option 1 ID : 264330633412

Option 2 ID : 264330633414

Option 3 ID : 264330633411

Option 4 ID : 264330633413

Status : Marked For Review

Chosen Option : 1

Q.4 Who among the following is the author of the book 'Selection Day'?

- Ans
- ☐ 1. Vikram Seth
 - ☒ 2. Aravind Adiga
 - ☐ 3. Chetan Bhagat
 - ☐ 4. Amish Tripathi

Question ID : 264330155456

Option 1 ID : 264330609228

Option 2 ID : 264330609227

Option 3 ID : 264330609230

Option 4 ID : 264330609229

Status : Marked For Review

Chosen Option : 2

Q.5 Which Article of the Constitution of India deals with the organization of village panchayat?

- Ans
- ☐ 1. Article 38
 - ☐ 2. Article 45
 - ☒ 3. Article 40
 - ☐ 4. Article 36

Question ID : 264330159905

Option 1 ID : 264330626967

Option 2 ID : 264330626969

Option 3 ID : 264330626968

Option 4 ID : 264330626970

Status : Answered

Chosen Option : 3

Q.6 Bharati Shivaji and Kanak Rele are exponents of _____.

- Ans
- ☐ 1. Manipuri
 - ☒ 2. Mohiniyattam
 - ☐ 3. Kathak
 - ☐ 4. Odissi

Question ID : 264330160852

Option 1 ID : 264330630742

Option 2 ID : 264330630741

Option 3 ID : 264330630740

Option 4 ID : 264330630739

Status : Marked For Review

Chosen Option : 1

Q.7 Which is the most common ore of oxidised mercury that occurs in granular crusts or veins associated with volcanic activity and hot springs?

- Ans
- ☒ 1. Diaspore
 - ☒ 2. Siderite
 - ☒ 3. Cinnabar
 - ☒ 4. Corundum

Question ID : 264330161402

Option 1 ID : 264330632936

Option 2 ID : 264330632935

Option 3 ID : 264330632938

Option 4 ID : 264330632937

Status : Marked For Review

Chosen Option : 3

Q.8 Women's World Boxing Championship 2023 was held in which city in India?

- Ans
- ☒ 1. Goa
 - ☒ 2. Punjab
 - ☒ 3. New Delhi
 - ☒ 4. Gujarat

Question ID : 264330158239

Option 1 ID : 264330620318

Option 2 ID : 264330620317

Option 3 ID : 264330620315

Option 4 ID : 264330620316

Status : Answered

Chosen Option : 3

Q.9 Who is regarded as the 'Mother of Indian Revolution'?

- Ans
- ☒ 1. Annie Besant
 - ☒ 2. Usha Mehta
 - ☒ 3. Madame Cama
 - ☒ 4. Kasturba Gandhi

Question ID : 264330162343

Option 1 ID : 264330636699

Option 2 ID : 264330636702

Option 3 ID : 264330636700

Option 4 ID : 264330636701

Status : Marked For Review

Chosen Option : 1

Q.10 Which microscopic, single-celled photosynthetic organisms are known as the primary producers of the ocean - the organisms that form the base of the aquatic food chains?

- Ans
- ☒ 1. Phytoplankton
 - ☒ 2. Zooplankton
 - ☒ 3. Bacterioplankton
 - ☒ 4. Virioplankton

Question ID : 264330160993

Option 1 ID : 264330631304

Option 2 ID : 264330631305

Option 3 ID : 264330631303

Option 4 ID : 264330631306

Status : Answered

Chosen Option : 1

Q.11 Which of the following novels is correctly paired with its author?

- Ans ☒ 1. The Shadow Lines – RK Narayan
☒ 2. Malgudi Days – Vikram Seth
☒ 3. The Namesake – Jhumpa Lahiri
☒ 4. Train to Pakistan – Amitav Ghosh

Question ID : 264330161758

Option 1 ID : 264330634360

Option 2 ID : 264330634361

Option 3 ID : 264330634362

Option 4 ID : 264330634359

Status : Marked For Review

Chosen Option : 3

Q.12 Which of the following is a communication mail channel in India?

- Ans ☒ 1. Pink channel
☒ 2. Yellow channel
☒ 3. Red channel
☒ 4. Green channel

Question ID : 264330160145

Option 1 ID : 264330627919

Option 2 ID : 264330627920

Option 3 ID : 264330627921

Option 4 ID : 264330627922

Status : Marked For Review

Chosen Option : 4

Q.13 Under the umbrella of Ujjwal Bharat Ujjwal Bhavishya–Power @ 2047, the PM inaugurated which of the following 100 MW Solar Projects in Telangana?

- Ans ☒ 1. Jurala Solar Power Plant
☒ 2. ReNew Solar Power Plant
☒ 3. Ramagundam Floating Solar Project
☒ 4. Dharmaraopet Solar Power Plant

Question ID : 264330161406

Option 1 ID : 264330632953

Option 2 ID : 264330632951

Option 3 ID : 264330632954

Option 4 ID : 264330632952

Status : Marked For Review

Chosen Option : 3

Q.14 What is the name of the geographic feature that serves as a boundary between Europe and Africa?

- Ans ☒ 1. Bosphorus Strait
☒ 2. Strait of Gibraltar
☒ 3. Dardanelles Strait
☒ 4. Malacca Strait

Question ID : 264330161327

Option 1 ID : 264330632636

Option 2 ID : 264330632635

Option 3 ID : 264330632638

Option 4 ID : 264330632637

Status : Answered

Chosen Option : 2

Q.15 Who among the following dancers is associated with Indian classical dance form of Kathak?

- Ans
- ☐ 1. Amubi Singh
 - ☒ 2. Pandit Birju Maharaj
 - ☐ 3. Dr. Kanak Rele
 - ☐ 4. Dr. Minati Mishra

Question ID : 264330155532

Option 1 ID : 264330609532

Option 2 ID : 264330609531

Option 3 ID : 264330609534

Option 4 ID : 264330609533

Status : Answered

Chosen Option : 2

Q.16 What is the primary purpose of microfinance institutions (MFIs) in India?

- Ans
- ☐ 1. To promote consumer spending among middle-class households
 - ☐ 2. To offer financial services exclusively to large businesses
 - ☒ 3. To provide small loans to low-income individuals
 - ☐ 4. To facilitate foreign investment in the Indian economy

Question ID : 264330157289

Option 1 ID : 264330616521

Option 2 ID : 264330616520

Option 3 ID : 264330616519

Option 4 ID : 264330616522

Status : Answered

Chosen Option : 3

Q.17 Which of the following is true about transfer payments in relation to personal income?

- Ans
- ☒ 1. Transfer payments are included in personal income.
 - ☐ 2. Transfer payments have no impact on personal income.
 - ☐ 3. Transfer payments are included in personal income only for businesses.
 - ☐ 4. Transfer payments are excluded from personal income.

Question ID : 264330157320

Option 1 ID : 264330616643

Option 2 ID : 264330616645

Option 3 ID : 264330616646

Option 4 ID : 264330616644

Status : Marked For Review

Chosen Option : 1

Q.18 Who among the following reformers initially set up a school for girls in Calcutta?

- Ans
- ☐ 1. Narayana Guru
 - ☐ 2. Mahatma Phule
 - ☐ 3. Swami Dayanand Saraswati
 - ☒ 4. Ishwar Chandra Vidyasagar

Question ID : 264330160888

Option 1 ID : 264330630883

Option 2 ID : 264330630886

Option 3 ID : 264330630884

Option 4 ID : 264330630885

Status : Answered

Chosen Option : 4

Q.19 Bharhut Stupa is located in which of the following states?

- Ans ☒ 1. Punjab
☒ 2. Madhya Pradesh
☒ 3. Uttar Pradesh
☒ 4. Bihar

Question ID : 264330160757

Option 1 ID : 264330630359

Option 2 ID : 264330630362

Option 3 ID : 264330630360

Option 4 ID : 264330630361

Status : Marked For Review

Chosen Option : 4

Q.20 The most famous of all Jain festivals, Mahamastakabhisheka is performed every 12 years at the Digambara sacred complex at _____ in Karnataka.

- Ans ☒ 1. Keelakuilkudi
☒ 2. Jinanathapura
☒ 3. Shravanabelagola
☒ 4. Puliarmala

Question ID : 264330161348

Option 1 ID : 264330632719

Option 2 ID : 264330632722

Option 3 ID : 264330632721

Option 4 ID : 264330632720

Status : Marked For Review

Chosen Option : 3

Q.21 Which religion has the maximum number of followers in Bhutan?

- Ans ☒ 1. Hindu
☒ 2. Islam
☒ 3. Buddhism
☒ 4. Christian

Question ID : 264330161564

Option 1 ID : 264330633586

Option 2 ID : 264330633583

Option 3 ID : 264330633584

Option 4 ID : 264330633585

Status : Answered

Chosen Option : 3

Q.22 The Madhavpur fair is held at _____.

- Ans ☒ 1. Bhatinda
☒ 2. Moradabad
☒ 3. Porbandar
☒ 4. Jaisalmer

Question ID : 264330159085

Option 1 ID : 264330623700

Option 2 ID : 264330623699

Option 3 ID : 264330623701

Option 4 ID : 264330623702

Status : Marked For Review

Chosen Option : 2

Q.23 The former captain of the Indian women's hockey team _____ was conferred with the BBC Lifetime Achievement Award for her contribution to Indian sports and inspiring generations of players.

- Ans ☒ 1. Rani Rampal
☒ 2. Vandana Katariya
☒ 3. Savita Punia
☒ 4. Pritam Siwach

Question ID : 264330161436

Option 1 ID : 264330633074

Option 2 ID : 264330633073

Option 3 ID : 264330633072

Option 4 ID : 264330633071

Status : Marked For Review

Chosen Option : 1

Q.24 Who among the following is a Bharatanatyam and Kathakali dancer?

- Ans ☒ 1. Padma Subrahmanayam
☒ 2. Sonal Mansingh
☒ 3. Shovana Narayan
☒ 4. Mrinalini Sarabhai

Question ID : 264330159065

Option 1 ID : 264330623622

Option 2 ID : 264330623621

Option 3 ID : 264330623620

Option 4 ID : 264330623619

Status : Marked For Review

Chosen Option : 4

Q.25 Which Article of the Constitution of India guarantees the right to move the Supreme Court for the enforcement of the fundamental rights?

- Ans ☒ 1. Article 21
☒ 2. Article 32
☒ 3. Article 25
☒ 4. Article 29

Question ID : 264330159918

Option 1 ID : 264330627019

Option 2 ID : 264330627022

Option 3 ID : 264330627020

Option 4 ID : 264330627021

Status : Answered

Chosen Option : 2

Q.1 Parts of the following sentence have been given as options. Select the option that contains an error.

Existentialism has a reputation for being angst-ridden and gloomy mostly because of its emphasis on pondering the meaningless of existence.

Ans ☒ 1. on pondering the meaningless of existence

☐ 2. mostly because of its emphasis

☐ 3. Existentialism has a reputation

☐ 4. for being angst-ridden and gloomy

Question ID : 264330153605

Option 1 ID : 264330601906

Option 2 ID : 264330601905

Option 3 ID : 264330601903

Option 4 ID : 264330601904

Status : Answered

Chosen Option : 1

Q.2 Select the most appropriate option that can substitute the underlined segment in the given sentence.

To preparing the vine for plant, it should be cut back to 2 ft.

Ans ☐ 1. prepares in vine in plant

☐ 2. prepare a vine in planting

☐ 3. prepared the vine of plant

☒ 4. prepare the vine for planting

Question ID : 264330153484

Option 1 ID : 264330601451

Option 2 ID : 264330601453

Option 3 ID : 264330601454

Option 4 ID : 264330601452

Status : Answered

Chosen Option : 4

Q.3 Select the most appropriate ANTONYM of the word given in brackets to fill in the blank.

The student provided her English teacher a short and _____(incoherent) account of her journey to Shimla with her parents.

Ans ☐ 1. humble

☒ 2. lucid

☐ 3. rough

☐ 4. genuine

Question ID : 264330152698

Option 1 ID : 264330598395

Option 2 ID : 264330598398

Option 3 ID : 264330598396

Option 4 ID : 264330598397

Status : Answered

Chosen Option : 2

Q.4 The following sentence has been split into four segments. Identify the segment that contains a grammatical error.

I want to / give you / an information about / the missing necklace.

Ans ✓ 1. an information about

✗ 2. the missing necklace

✗ 3. give you

✗ 4. I want to

Question ID : 264330153420

Option 1 ID : 264330601213

Option 2 ID : 264330601214

Option 3 ID : 264330601212

Option 4 ID : 264330601211

Status : Marked For Review

Chosen Option : 1

Q.5 Identify the most appropriate meaning of the given word.
Ancient

Ans ✓ 1. Antique

✗ 2. Unworn

✗ 3. Contemporary

✗ 4. Recent

Question ID : 264330152573

Option 1 ID : 264330597895

Option 2 ID : 264330597897

Option 3 ID : 264330597896

Option 4 ID : 264330597898

Status : Answered

Chosen Option : 1

Q.6 Select the most appropriate option that can substitute the underlined segment in the given sentence.

They are sell their company's products to people.

Ans ✗ 1. are sell the company

✓ 2. are selling their company's

✗ 3. was sell the company's

✗ 4. is selling they company's

Question ID : 264330153474

Option 1 ID : 264330601414

Option 2 ID : 264330601413

Option 3 ID : 264330601412

Option 4 ID : 264330601411

Status : Answered

Chosen Option : 2

Q.7 Select the most appropriate meaning of the underlined idiom.
Mary is a ball of fire and is always engaged in something creative.

- Ans** ☒ 1. An active and energetic person
☐ 2. A dull and insipid person
☐ 3. To be good and beneficial for someone
☐ 4. A talkative person

Question ID : 264330151831

Option 1 ID : 264330594952

Option 2 ID : 264330594951

Option 3 ID : 264330594953

Option 4 ID : 264330594954

Status : Answered

Chosen Option : 1

Q.8 Select the most appropriate idiom to fill in the blank.
By living in a rural area with access to the city, she gets _____.

- Ans** ☒ 1. the best of both worlds
☐ 2. to keep an ear to the ground
☐ 3. on cloud nine
☐ 4. in for a penny in for a pound

Question ID : 264330151890

Option 1 ID : 264330595180

Option 2 ID : 264330595181

Option 3 ID : 264330595179

Option 4 ID : 264330595182

Status : Answered

Chosen Option : 1

Q.9 Select the most appropriate option that can substitute the underlined segment in the given sentence.

The cats food bowl was empty, so he meowed incessantly until his owner finally filled it with fresh kibble.

- Ans** ☐ 1. The cats'
☐ 2. A cat's
☐ 3. A cats'
☒ 4. The cat's

Question ID : 264330151856

Option 1 ID : 264330595043

Option 2 ID : 264330595044

Option 3 ID : 264330595046

Option 4 ID : 264330595045

Status : Answered

Chosen Option : 4

Q.10 Select the most appropriate meaning of the given idiom.
Get your act together

- Ans
- ☒ 1. To have patience
 - ☒ 2. To stay together
 - ☒ 3. To act in a play
 - ☒ 4. Get organised and do things better

Question ID : 264330152726

Option 1 ID : 264330598504

Option 2 ID : 264330598506

Option 3 ID : 264330598503

Option 4 ID : 264330598505

Status : Marked For Review

Chosen Option : 4

Q.11 Select the option that can be used as a one-word substitute for the given group of words.
Unpleasant

- Ans
- ☒ 1. Nebulous
 - ☒ 2. Natal
 - ☒ 3. Negligible
 - ☒ 4. Nasty

Question ID : 264330151909

Option 1 ID : 264330595253

Option 2 ID : 264330595251

Option 3 ID : 264330595254

Option 4 ID : 264330595252

Status : Answered

Chosen Option : 4

Q.12 The following sentence has been divided into four parts. Identify the part that contains an error.
(A) The mother exclaimed / (B) when she saw her son / (C) stumble on the race track, / (D) "Look, he fells!"

- Ans
- ☒ 1. B
 - ☒ 2. D
 - ☒ 3. C
 - ☒ 4. A

Question ID : 264330152629

Option 1 ID : 264330598122

Option 2 ID : 264330598119

Option 3 ID : 264330598121

Option 4 ID : 264330598120

Status : Marked For Review

Chosen Option : 2

Q.13 Select the most appropriate option that can rectify the underlined segment in the given sentence. If there is no need to rectify it, select 'no rectification needed'.

The conductor said that it was the worse quake he ever knew.

- Ans ☒ 1. more bad
☒ 2. bad
☒ 3. no rectification needed
☒ 4. worst

Question ID : 264330153466

Option 1 ID : 264330601380

Option 2 ID : 264330601379

Option 3 ID : 264330601382

Option 4 ID : 264330601381

Status : Answered

Chosen Option : 4

Q.14 Select the most appropriate meaning of the underlined idiom in the following sentence.

After having invested so much time and energy into the project, we are now back to square one.

- Ans ☒ 1. Not ready for the consequence
☒ 2. In the same city
☒ 3. Fighting with each other
☒ 4. Having to start all over again

Question ID : 264330153049

Option 1 ID : 264330599766

Option 2 ID : 264330599763

Option 3 ID : 264330599765

Option 4 ID : 264330599764

Status : Answered

Chosen Option : 4

Q.15 Select the option that can be used as a one-word substitute for the given group of words.

Killing of one's own father

- Ans ☒ 1. Matricide
☒ 2. Filicide
☒ 3. Patricide
☒ 4. Suicide

Question ID : 264330151813

Option 1 ID : 264330594879

Option 2 ID : 264330594881

Option 3 ID : 264330594880

Option 4 ID : 264330594882

Status : Answered

Chosen Option : 3

Q.16 The sentence given below has spelling errors. Select the sentence without spelling errors.

Though we read and hear a lot on green initiative, we hardly tweak our routines to suite the larger picture.

Ans ✓ 1. Though we read and hear a lot on green initiatives, we hardly tweak our routines to suit the larger picture.

✗ 2. Throug we read and hear a lot on green initiatives, we hardly tweak our routines to suite the larger picture.

✗ 3. Though we read and hear a lot on green initiatives, we hardly tweek our routines to suite the larger picture.

✗ 4. Though we read and hear a lot on green iniciatives, we hardly tweak our routines to suite the larger picture.

Question ID : 264330153221

Option 1 ID : 264330600443

Option 2 ID : 264330600444

Option 3 ID : 264330600446

Option 4 ID : 264330600445

Status : Answered

Chosen Option : 1

Q.17 Select the most appropriate synonym of the bracketed word in the following sentence to fill in the blank.

The athlete's injury was a _____ (defeat) for the team's chances of winning the championship.

Ans ✗ 1. progression

✗ 2. breakthrough

✗ 3. stress

✓ 4. setback

Question ID : 264330152651

Option 1 ID : 264330598209

Option 2 ID : 264330598208

Option 3 ID : 264330598210

Option 4 ID : 264330598207

Status : Answered

Chosen Option : 4

Q.18 Select the INCORRECTLY spelt word.

Ans ✗ 1. Parallel

✗ 2. Recommend

✓ 3. Irresistable

✗ 4. Tomorrow

Question ID : 264330152645

Option 1 ID : 264330598185

Option 2 ID : 264330598183

Option 3 ID : 264330598186

Option 4 ID : 264330598184

Status : Answered

Chosen Option : 4

Q.19 Select the correctly spelt word.

- Ans ☒ 1. Millennium
☐ 2. Milennium
☐ 3. Millenium
☐ 4. Milenium

Question ID : 264330152963

Option 1 ID : 264330599427

Option 2 ID : 264330599428

Option 3 ID : 264330599429

Option 4 ID : 264330599430

Status : Answered

Chosen Option : 1

Q.20 Select the most appropriate option that can substitute the underlined segment in the following sentence.

She proposed to write the life history of the famous poet.

- Ans ☐ 1. novel
☒ 2. biography
☐ 3. mythology
☐ 4. autobiography

Question ID : 264330152632

Option 1 ID : 264330598134

Option 2 ID : 264330598132

Option 3 ID : 264330598133

Option 4 ID : 264330598131

Status : Answered

Chosen Option : 2

Comprehension:

In the following passage, some words have been deleted. Read the passage carefully and select the most appropriate option to fill in each blank.

Democracy is a form of government where the power lies _____(1) the people. It is based on the principles of equality, freedom and the rule of law. In a democratic society, _____(2) have the right to participate in the decision-making process, _____(3) directly or through elected representatives. Democracy also allows for the _____(4) of individual rights and liberties. While democracy is not without its challenges, such as the need to balance competing interests and the risk of _____(5) movements, it remains one of the most widely embraced forms of government around the world.

SubQuestion No : 21

Q.21 Select the most appropriate option to fill in blank no. 1.

- Ans ☐ 1. towards
☐ 2. on
☐ 3. by
☒ 4. with

Question ID : 264330151893

Option 1 ID : 264330595188

Option 2 ID : 264330595187

Option 3 ID : 264330595189

Option 4 ID : 264330595190

Status : Answered

Chosen Option : 2

Comprehension:

In the following passage, some words have been deleted. Read the passage carefully and select the most appropriate option to fill in each blank.

Democracy is a form of government where the power lies _____(1) the people. It is based on the principles of equality, freedom and the rule of law. In a democratic society, _____(2) have the right to participate in the decision-making process, _____(3) directly or through elected representatives. Democracy also allows for the _____(4) of individual rights and liberties. While democracy is not without its challenges, such as the need to balance competing interests and the risk of _____(5) movements, it remains one of the most widely embraced forms of government around the world.

SubQuestion No : 22

Q.22 Select the most appropriate option to fill in blank no. 2.

- Ans
- ☒ 1. lawyers
 - ☒ 2. humans
 - ☒ 3. politicians
 - ☒ 4. citizens

Question ID : 264330151894

Option 1 ID : 264330595193

Option 2 ID : 264330595194

Option 3 ID : 264330595191

Option 4 ID : 264330595192

Status : Answered

Chosen Option : 4

Comprehension:

In the following passage, some words have been deleted. Read the passage carefully and select the most appropriate option to fill in each blank.

Democracy is a form of government where the power lies _____(1) the people. It is based on the principles of equality, freedom and the rule of law. In a democratic society, _____(2) have the right to participate in the decision-making process, _____(3) directly or through elected representatives. Democracy also allows for the _____(4) of individual rights and liberties. While democracy is not without its challenges, such as the need to balance competing interests and the risk of _____(5) movements, it remains one of the most widely embraced forms of government around the world.

SubQuestion No : 23

Q.23 Select the most appropriate option to fill in blank no. 3.

- Ans
- ☒ 1. either
 - ☒ 2. however
 - ☒ 3. neither
 - ☒ 4. also

Question ID : 264330151895

Option 1 ID : 264330595196

Option 2 ID : 264330595197

Option 3 ID : 264330595198

Option 4 ID : 264330595195

Status : Answered

Chosen Option : 1

Comprehension:

In the following passage, some words have been deleted. Read the passage carefully and select the most appropriate option to fill in each blank.

Democracy is a form of government where the power lies _____(1) the people. It is based on the principles of equality, freedom and the rule of law. In a democratic society, _____(2) have the right to participate in the decision-making process, _____(3) directly or through elected representatives. Democracy also allows for the _____(4) of individual rights and liberties. While democracy is not without its challenges, such as the need to balance competing interests and the risk of _____(5) movements, it remains one of the most widely embraced forms of government around the world.

SubQuestion No : 24

Q.24 Select the most appropriate option to fill in blank no. 4.

- Ans ☒ 1. delimitation
☒ 2. protection
☒ 3. diversion
☒ 4. proscription

Question ID : 264330151896

Option 1 ID : 264330595200

Option 2 ID : 264330595199

Option 3 ID : 264330595202

Option 4 ID : 264330595201

Status : Answered

Chosen Option : 2

Comprehension:

In the following passage, some words have been deleted. Read the passage carefully and select the most appropriate option to fill in each blank.

Democracy is a form of government where the power lies _____(1) the people. It is based on the principles of equality, freedom and the rule of law. In a democratic society, _____(2) have the right to participate in the decision-making process, _____(3) directly or through elected representatives. Democracy also allows for the _____(4) of individual rights and liberties. While democracy is not without its challenges, such as the need to balance competing interests and the risk of _____(5) movements, it remains one of the most widely embraced forms of government around the world.

SubQuestion No : 25

Q.25 Select the most appropriate option to fill in blank no. 5.

- Ans ☒ 1. marginal
☒ 2. elitist
☒ 3. populist
☒ 4. negligible

Question ID : 264330151897

Option 1 ID : 264330595204

Option 2 ID : 264330595203

Option 3 ID : 264330595206

Option 4 ID : 264330595205

Status : Answered

Chosen Option : 3