

Multi Tasking Non Technical Staff Havaladar CBIC and CBN Examination 2021

Roll Number	
Candidate Name	
Venue Name	
Exam Date	08/07/2022
Exam Time	9:00 AM - 10:30 AM
Subject	MTS Non technical and Havaladar Examination 2021

Section : General English

Q.1 Select the option that will improve the underlined part of the sentence. In case no improvement is needed, select 'No improvement required'.

The scientists have so far focused on improve cropped yields.

- Ans ☒ 1. improving crop
☒ 2. improvement crop
☒ 3. No improvement required
☒ 4. improve cropping

Question ID : 26433051091

Status : Answered

Chosen Option : 1

Q.2 The following sentence has been split into four segments. Identify the segment that contains a grammatical error.

The brightest stars / can be 30,000 times / most luminous / than the Sun

- Ans ☒ 1. The brightest stars
☒ 2. most luminous
☒ 3. can be 30,000 times
☒ 4. than the Sun

Question ID : 26433051592

Status : Answered

Chosen Option : 2

Q.3 Select the most appropriate option to fill in the blank.

He persuaded other towns near Amman to send _____ soldiers to help him.

- Ans ☒ 1. its
☒ 2. there
☒ 3. their
☒ 4. they

Question ID : 26433050745

Status : Answered

Chosen Option : 2

Q.4 Select the most appropriate synonym of the given word.

Callous

- Ans ☒ 1. Brutal
☐ 2. Problematic
☐ 3. Large
☐ 4. Humane

Question ID : 26433051277
Status : Not Answered
Chosen Option : --

Q.5 Select the most appropriate synonym of the given word.

Caustic

- Ans ☒ 1. Acidic
☐ 2. Photogenic
☐ 3. Basic
☐ 4. Soothing

Question ID : 26433051764
Status : Answered
Chosen Option : 3

Q.6 Select the most appropriate option to fill in the blank.

Could you spell your name _____, please?

- Ans ☐ 1. weakly
☐ 2. never
☒ 3. again
☐ 4. forever

Question ID : 26433051806
Status : Answered
Chosen Option : 3

Q.7 Select the option that will improve the underlined part of the given sentence. In case no improvement is needed, select 'No improvement required'.

The courses provided by the training institute were more than enough .

- Ans ☐ 1. more then enough
☐ 2. more enough
☐ 3. most enough
☒ 4. No improvement required

Question ID : 26433051752
Status : Answered
Chosen Option : 4

Q.8 Select the most appropriate meaning of the given idiom.

To walk the tight rope

- Ans
- ☒ 1. Be an expert
 - ☒ 2. Be very cautious
 - ☒ 3. Be well trained
 - ☒ 4. Be very nervous

Question ID : 26433051794

Status : Answered

Chosen Option : 2

Q.9 The following sentence has been divided into parts. One of them may contain an error. Select the part that contains the error from the given options. If you don't find any error, mark 'No error' as your answer.

Land revenue was one of the / major source of income / for Britishers in India.

- Ans
- ☒ 1. No error
 - ☒ 2. Land revenue was one of the
 - ☒ 3. major source of income
 - ☒ 4. for Britishers in India

Question ID : 26433051747

Status : Answered

Chosen Option : 3

Q.10 Select the most appropriate option to fill in the blank.

Pilots must be _____ at all times to keep their passengers safe during the flight.

- Ans
- ☒ 1. thirsty
 - ☒ 2. distant
 - ☒ 3. vigilant
 - ☒ 4. forceful

Question ID : 26433051052

Status : Answered

Chosen Option : 3

Q.11 Select the most appropriate option to fill in the blank.

If she likes something, she'll buy it _____ much it costs.

- Ans
- ☒ 1. however
 - ☒ 2. whatever
 - ☒ 3. also
 - ☒ 4. very

Question ID : 26433051398

Status : Answered

Chosen Option : 2

Q.12 Select the sentence in which a word is INCORRECTLY spelt.

- Ans ☒ 1. He hoped that he had won the prestigious award.
☒ 2. I could never be as talented as him.
☒ 3. His breathe smelled of garlic.
☒ 4. A woman gasped in horror at the sight of him.

Question ID : 26433051666
Status : Answered
Chosen Option : 3

Q.13 Select the most appropriate ANTONYM of the given word.

Wicked

- Ans ☒ 1. Evil
☒ 2. Sinful
☒ 3. Errant
☒ 4. Moral

Question ID : 26433051041
Status : Answered
Chosen Option : 4

Q.14 Select the most appropriate synonym of the underlined word.

Medicines should be ordered by the generic name, not by the proprietary or trade name.

- Ans ☒ 1. Exclusive
☒ 2. General
☒ 3. Individual
☒ 4. Specific

Question ID : 26433051720
Status : Answered
Chosen Option : 2

Q.15 Select the most appropriate option to fill in the blank.

Ms. Gupta expressed her _____ for my political understanding.

- Ans ☒ 1. admiration
☒ 2. location
☒ 3. strength
☒ 4. compassion

Question ID : 26433051285
Status : Answered
Chosen Option : 4

Q.16 Select the most appropriate meaning of the underlined idiom.

When those thugs come near you, run at the drop of a hat.

- Ans
- ☒ 1. Be dressed for a party
 - ☒ 2. With all your belongings
 - ☒ 3. Go on a short trip
 - ☒ 4. Without delay

Question ID : 26433051020
Status : Answered
Chosen Option : 4

Q.17 Select the option that can be used as a one-word substitute for the given group of words.

A person who makes maps

- Ans
- ☒ 1. Sinecure
 - ☒ 2. Anarchist
 - ☒ 3. Cartographer
 - ☒ 4. Polyglot

Question ID : 26433051100
Status : Answered
Chosen Option : 3

Q.18 The following sentence has been divided into parts. One of them may contain an error. Select the part that contains the error from the given options. If you don't find any error, mark 'No error' as your answer.

He is / struggling to make / a honest living.

- Ans
- ☒ 1. struggling to make
 - ☒ 2. No error
 - ☒ 3. a honest living
 - ☒ 4. He is

Question ID : 26433051645
Status : Answered
Chosen Option : 2

Q.19 Select the correctly spelt word.

- Ans
- ☒ 1. Institute
 - ☒ 2. Insitute
 - ☒ 3. Instute
 - ☒ 4. Insetute

Question ID : 26433051049
Status : Answered
Chosen Option : 1

Q.20 Select the option that will improve the underlined part of the given sentence. In case no improvement is needed, select 'No improvement required'.

While travelling, one comes across the larger number of people.

- Ans
- ☒ 1. the large number off
 - ☒ 2. No improvement required
 - ☒ 3. an larger number of
 - ☒ 4. a large number of

Question ID : 26433050614

Status : Answered

Chosen Option : 4

Comprehension:

In the following passage, some words have been deleted. Read the passage carefully and select the most appropriate option to fill in each blank.

In Delhi, while the bigger schools transport their students in their own or hired buses; others rely on vans, autos and e-rickshaws where many reckless drivers pack in too many children and drive (1) _____, often causing accidents. Many parents take time off their daily (2) _____ to do school-runs. Some use vehicles while others just walk their children to school. Two months ago, it was reported how in the (3) _____ of road-crossing facilities near schools, a bunch of parents were taking turns to play traffic marshals. Not so long ago, children could just walk or cycle to their schools, private tuition classes or sports practice. In fact, school authorities (4) _____ to admit students living within walkable distances so that they wouldn't have to take the school bus or public transport. As Delhi grew, its children (5) _____ not only traffic, broken infrastructure but also violence, air-pollution and overcrowded living conditions.

SubQuestion No : 21

Q.21 Select the most appropriate option to fill in blank number 1.

- Ans
- ☒ 1. humbly
 - ☒ 2. decisively
 - ☒ 3. rashly
 - ☒ 4. commonly

Question ID : 26433051270

Status : Answered

Chosen Option : 3

Comprehension:

In the following passage, some words have been deleted. Read the passage carefully and select the most appropriate option to fill in each blank.

In Delhi, while the bigger schools transport their students in their own or hired buses; others rely on vans, autos and e-rickshaws where many reckless drivers pack in too many children and drive (1) _____, often causing accidents. Many parents take time off their daily (2) _____ to do school-runs. Some use vehicles while others just walk their children to school. Two months ago, it was reported how in the (3) _____ of road-crossing facilities near schools, a bunch of parents were taking turns to play traffic marshals. Not so long ago, children could just walk or cycle to their schools, private tuition classes or sports practice. In fact, school authorities (4) _____ to admit students living within walkable distances so that they wouldn't have to take the school bus or public transport. As Delhi grew, its children (5) _____ not only traffic, broken infrastructure but also violence, air-pollution and overcrowded living conditions.

SubQuestion No : 22

Q.22 Select the most appropriate option to fill in blank number 2.

- Ans ☒ 1. habit
☒ 2. routines
☐ 3. problems
☐ 4. task

Question ID : 26433051271

Status : Answered

Chosen Option : 2

Comprehension:

In the following passage, some words have been deleted. Read the passage carefully and select the most appropriate option to fill in each blank.

In Delhi, while the bigger schools transport their students in their own or hired buses; others rely on vans, autos and e-rickshaws where many reckless drivers pack in too many children and drive (1) _____, often causing accidents. Many parents take time off their daily (2) _____ to do school-runs. Some use vehicles while others just walk their children to school. Two months ago, it was reported how in the (3) _____ of road-crossing facilities near schools, a bunch of parents were taking turns to play traffic marshals. Not so long ago, children could just walk or cycle to their schools, private tuition classes or sports practice. In fact, school authorities (4) _____ to admit students living within walkable distances so that they wouldn't have to take the school bus or public transport. As Delhi grew, its children (5) _____ not only traffic, broken infrastructure but also violence, air-pollution and overcrowded living conditions.

SubQuestion No : 23

Q.23 Select the most appropriate option to fill in blank number 3.

- Ans ☒ 1. absence
☐ 2. non-compliance
☐ 3. defiance
☐ 4. reference

Question ID : 26433051272

Status : Answered

Chosen Option : 1

Comprehension:

In the following passage, some words have been deleted. Read the passage carefully and select the most appropriate option to fill in each blank.

In Delhi, while the bigger schools transport their students in their own or hired buses; others rely on vans, autos and e-rickshaws where many reckless drivers pack in too many children and drive (1) _____, often causing accidents. Many parents take time off their daily (2) _____ to do school-runs. Some use vehicles while others just walk their children to school. Two months ago, it was reported how in the (3) _____ of road-crossing facilities near schools, a bunch of parents were taking turns to play traffic marshals. Not so long ago, children could just walk or cycle to their schools, private tuition classes or sports practice. In fact, school authorities (4) _____ to admit students living within walkable distances so that they wouldn't have to take the school bus or public transport. As Delhi grew, its children (5) _____ not only traffic, broken infrastructure but also violence, air-pollution and overcrowded living conditions.

SubQuestion No : 24

Q.24 Select the most appropriate option to fill in blank number 4.

- Ans
- ☒ 1. rescued
 - ☒ 2. guided
 - ☒ 3. added
 - ☒ 4. preferred

Question ID : 26433051273

Status : Answered

Chosen Option : 4

Comprehension:

In the following passage, some words have been deleted. Read the passage carefully and select the most appropriate option to fill in each blank.

In Delhi, while the bigger schools transport their students in their own or hired buses; others rely on vans, autos and e-rickshaws where many reckless drivers pack in too many children and drive (1) _____, often causing accidents. Many parents take time off their daily (2) _____ to do school-runs. Some use vehicles while others just walk their children to school. Two months ago, it was reported how in the (3) _____ of road-crossing facilities near schools, a bunch of parents were taking turns to play traffic marshals. Not so long ago, children could just walk or cycle to their schools, private tuition classes or sports practice. In fact, school authorities (4) _____ to admit students living within walkable distances so that they wouldn't have to take the school bus or public transport. As Delhi grew, its children (5) _____ not only traffic, broken infrastructure but also violence, air-pollution and overcrowded living conditions.

SubQuestion No : 25

Q.25 Select the most appropriate option to fill in blank number 5.

- Ans
- ☒ 1. faced
 - ☒ 2. replied
 - ☒ 3. called
 - ☒ 4. relied

Question ID : 26433051274

Status : Answered

Chosen Option : 1

Q.1 In a certain code language, 'VIOLET' is written as 'TJMMCU', and 'MARKET' is written as 'KBPLCU'. How will 'ROCKET' be written in that language?

- Ans ☒ 1. PPALCU
☒ 2. UCALTP
☒ 3. GGSJAL
☒ 4. PAPPLU

Question ID : 26433048471
Status : Answered
Chosen Option : 1

Q.2 Select the option in which the two numbers are related in the same way as are the numbers in the given number-pair.

416 : 614 :: ?

- Ans ☒ 1. 384 : 843
☒ 2. 286 : 682
☒ 3. 483 : 843
☒ 4. 592 : 925

Question ID : 26433048642
Status : Answered
Chosen Option : 2

Q.3 Select the number from among the given options that can replace the question mark (?) in the following series.

12, 25, 51, 103, 207, ?

- Ans ☒ 1. 415
☒ 2. 413
☒ 3. 416
☒ 4. 414

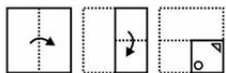
Question ID : 26433048968
Status : Answered
Chosen Option : 1

Q.4 In a certain code language, if bread is called butter, butter is called blood, blood is called water, water is called cheese, and cheese is called toner, then what is red in colour?

- Ans ☒ 1. Water
☒ 2. Butter
☒ 3. Toner
☒ 4. Blood

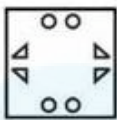
Question ID : 26433048124
Status : Answered
Chosen Option : 1

Q.5 The sequence of folding a piece of paper and the manner in which the folded paper has been cut is shown in the following figures. How would this paper look when unfolded?

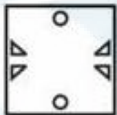


Ans

☒ 1.



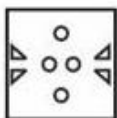
☒ 2.



☒ 3.



☒ 4.



Question ID : 26433048662

Status : Answered

Chosen Option : 3

Q.6 In a certain code language, 'READS' is written as 'IVZWH', and 'FRIBC' is written as 'UIRYX'. How will 'GHKTX' be written in that language?

Ans

☒ 1. TSPCG

☒ 2. TSPGD

☒ 3. TSPGC

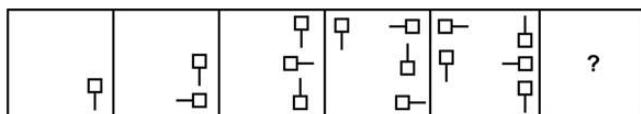
☒ 4. TTPGC

Question ID : 26433048895

Status : Answered

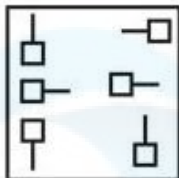
Chosen Option : 3

Q.7 Select the figure from among the given options that can replace the question mark (?) in the following series.

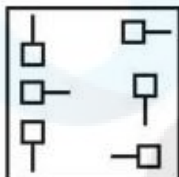


Ans

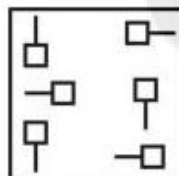
✗ 1.



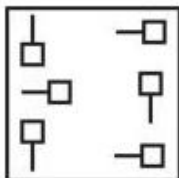
✗ 2.



✓ 3.



✗ 4.



Question ID : 26433048433

Status : Answered

Chosen Option : 3

Q.8 Which number will replace the question mark (?) in the following series?

40, 80, 200, 600, 2100, ?

Ans

✗ 1. 10500

✗ 2. 9600

✓ 3. 8400

✗ 4. 6300

Question ID : 26433048919

Status : Answered

Chosen Option : 3

Q.9 Seven girls G1, G2, G3, G4, G5, G6 and G7 sit in a row facing towards the north (not necessarily in the same order). G4 sits fifth to the right of G1. G4 does not sit at any of the extreme ends. G6 sits exactly in the middle of the row. G6 sits third to the left of G2. Only two girls sit between G7 and G5. G7 is not an immediate neighbour of G6. Who are the immediate neighbours of G3?

- Ans
- ☒ 1. G4 and G2
 - ☒ 2. G5 and G7
 - ☒ 3. G6 and G7
 - ☒ 4. G1 and G2

Question ID : 26433048980

Status : Answered

Chosen Option : 3

Q.10 Select the option in which the given figure is embedded.



Ans

- ☒ 1.
- ☒ 2.
- ☒ 3.
- ☒ 4.

Question ID : 26433048660

Status : Answered

Chosen Option : 3

Q.11 Select the option that is related to the fifth alphanumeric-cluster in the same way as the second alphanumeric-cluster is related to the first alphanumeric-cluster and the fourth alphanumeric-cluster is related to the third alphanumeric-cluster.

P4 : N9 :: M16 : K25 :: G49 : ?

- Ans
- ☒ 1. H55
 - ☒ 2. F64
 - ☒ 3. I72
 - ☒ 4. E64

Question ID : 26433048467

Status : Answered

Chosen Option : 4

Q.12 Select the option that is related to the third letter-cluster in the same way as the second letter-cluster is related to the first letter-cluster.

BAL : ODE :: AGR : ?

Ans ☒ 1. UKD

☒ 2. UJE

☒ 3. VJD

☒ 4. UJD

Question ID : 26433048899

Status : Answered

Chosen Option : 4

Q.13 In a certain code language, 'TOPICS' is written as 'QAGONS' and 'GREATH' is written as 'FRYDQF'. How will 'BANDEF' be written in that language?

Ans ☒ 1. DCCMZA

☒ 2. DCBMZA

☒ 3. DCBMYA

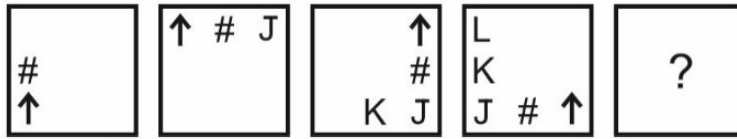
☒ 4. DCBNYA

Question ID : 26433049048

Status : Answered

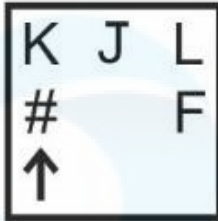
Chosen Option : 2

Q.14 Select the figure from among the given options that can replace the question mark (?) in the following series.

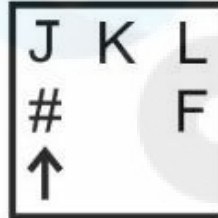


Ans

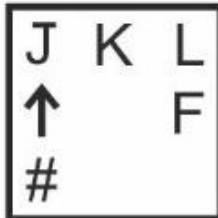
✗ 1.



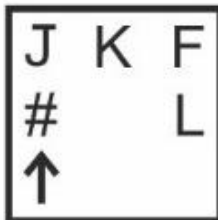
✓ 2.



✗ 3.



✗ 4.



Question ID : 26433048984

Status : Answered

Chosen Option : 2

Q.15 After interchanging the two signs + and ×, what will be the value of the given equation?

$$25 \times 5 + 4 \div 2 - 10 = ?$$

Ans

✗ 1. 35

✗ 2. 20

✗ 3. 30

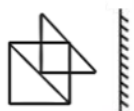
✓ 4. 25

Question ID : 26433048914

Status : Answered

Chosen Option : 4

Q.16 Select the correct mirror image of the given figure when the mirror is placed to its right side.



Ans

✗ 1.



✗ 2.



✗ 3.



✓ 4.



Question ID : 26433049136

Status : Answered

Chosen Option : 4

Q.17 The ages of seven boys B1, B2, B3, B4, B5, B6 and B7 are compared. All boys have different ages. The age of B4 is less than three boys. The age of B1 is only greater than B7 and B3. The age of B5 is greater than B6 but less than B2. The age of how many boys is less than B6?

Ans ✗ 1. 2

✗ 2. 1

✗ 3. 3

✓ 4. 4

Question ID : 26433048932

Status : Answered

Chosen Option : 4

Q.18 6 persons A, B, C, D, E and F are sitting around a rectangular table facing the centre (not necessarily in the same order). Two persons are sitting on each larger side and one person is sitting on each shorter side. D is sitting opposite to F. A and E are sitting on the same side. Neither B nor E is sitting just next to D. C sits to the right of D. Which of the following statements is correct?
I. C is the second to the left of F.
II. E is sitting opposite to C.

- Ans ☒ 1. Only I
☐ 2. Only II
☐ 3. Both I and II
☐ 4. Neither I nor II

Question ID : 26433048931
Status : Answered
Chosen Option : 1

Q.19 Select the option that is related to the fifth number in the same way as the second number is related to the first number and the fourth number is related to the third number.
NOTE: Operations should be performed on the whole numbers, without breaking down the numbers into its constituent digits. E.g. 13 – Operations on 13 such as adding /deleting /multiplying etc. to 13 can be performed. Breaking down 13 into 1 and 3 and then performing mathematical operations on 1 and 3 is not allowed)

21 : 9261 :: 17 : 4913 :: 8 : ?

- Ans ☐ 1. 1024
☐ 2. 488
☒ 3. 512
☐ 4. 2356

Question ID : 26433048429
Status : Answered
Chosen Option : 3

Q.20 Read the given statements and conclusions carefully. Assuming that the information given in the statements is true, even if it appears to be at variance with commonly known facts, decide which of the given conclusions logically follow(s) from the statements.

Statements:

- I. No car is red.
II. All reds are blues.

Conclusions:

- I. Some blues are not cars.
II. No red is a car.

- Ans ☒ 1. Both conclusions I and II follow
☐ 2. Neither conclusion I nor II follows
☐ 3. Only conclusion I follows
☐ 4. Only conclusion II follows

Question ID : 26433048653
Status : Answered
Chosen Option : 4

Q.21 Read the given statements and conclusions carefully. Assuming that the information given in the statements is true, even if it appears to be at variance with commonly known facts, decide which of the given conclusions logically follow(s) from the statements.

Statements:

Some blankets are pillows.

All pillows are cushions.

Conclusions:

I. Some blankets are cushions is a possibility.

II. Some cushions are pillows.

- Ans**
- ☒ 1. Only conclusion II follows
 - ☒ 2. Only conclusion I follows
 - ☒ 3. Neither conclusion I nor II follows
 - ☒ 4. Both conclusions I and II follow

Question ID : 26433048426

Status : Answered

Chosen Option : 4

Q.22 Select the option that is related to the fifth letter-cluster in the same way as the second letter-cluster is related to the first letter-cluster and the fourth letter-cluster is related to the third letter-cluster.

AZBZ : CYDY :: EXFX : GWHW :: IVJV : ?

- Ans**
- ☒ 1. IJKV
 - ☒ 2. KVLV
 - ☒ 3. IUJU
 - ☒ 4. KULU

Question ID : 26433048416

Status : Answered

Chosen Option : 4

Q.23 By interchanging the given two signs and two numbers (not digits), which of the following equations will NOT be correct?

× and −, 27 and 35

I. $27 \div 7 - 6 \times 5 + 35 = 53$

II. $11 - 7 + 35 \times 420 \div 27 = 93$

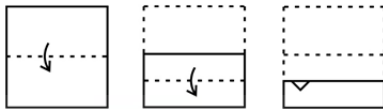
- Ans**
- ☒ 1. Neither I nor II
 - ☒ 2. Only II
 - ☒ 3. Both I and II
 - ☒ 4. Only I

Question ID : 26433049065

Status : Answered

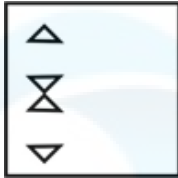
Chosen Option : 1

Q.24 The sequence of folding a piece of paper and the manner in which the folded paper has been cut is shown in the following figures. How would this paper look when unfolded?

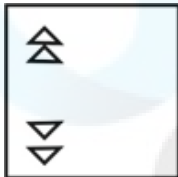


Ans

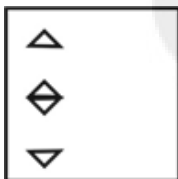
☒ 1.



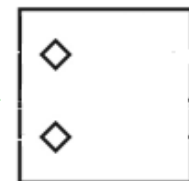
☒ 2.



☒ 3.



☒ 4.



Question ID : 26433048241

Status : Answered

Chosen Option : 4

Q.25 Select the letter-cluster from among the given options that can replace the question mark (?) in the following series.

RN, NP, JR, ?, BV

Ans ☒ 1. ER

☒ 2. ET

☒ 3. FS

☒ 4. FT

Question ID : 26433049077

Status : Answered

Chosen Option : 4

Section : Numerical Aptitude

Q.1 यदि ब्याज त्रैमासिक देय है, तो ₹8,000 की राशि पर 5% की वार्षिक दर से 3 महीने का चक्रवृद्धि ब्याज कितना होगा?

- Ans
- ✓ 1. ₹100
 - ✗ 2. ₹150
 - ✗ 3. ₹80
 - ✗ 4. ₹120

Question ID : 26433049983
Status : Answered
Chosen Option : 1

Q.2 A bag contains ₹5 and ₹10 coins for a total of 40 coins and a total amount of ₹310. What is the difference between the amount made up of all ₹10 coins and the amount made up of all ₹5 coins?

- Ans
- ✗ 1. ₹125
 - ✗ 2. ₹120
 - ✗ 3. ₹110
 - ✓ 4. ₹130

Question ID : 26433050304
Status : Answered
Chosen Option : 4

Q.3 The cost price of a car is five times of the loss incurred on selling this car. What is the loss percentage?

- Ans
- ✗ 1. 25%
 - ✗ 2. 16.66%
 - ✓ 3. 20%
 - ✗ 4. 33.33%

Question ID : 26433049748
Status : Answered
Chosen Option : 3

Q.4 What is the value of $5 + [12 + 3 \times \{5 + (6 \times 3 - 5)\}]$?

- Ans
- ✗ 1. 75
 - ✗ 2. 74
 - ✓ 3. 71
 - ✗ 4. 66

Question ID : 26433049763
Status : Answered
Chosen Option : 3

Q.5 The simple interest on a sum at 3% p.a in 3 years is ₹315. What is the compound interest on the same sum at 4% p.a in 2 years, interest compounded yearly?

- Ans**
- ☒ 1. ₹228.48
 - ☒ 2. ₹204
 - ☒ 3. ₹326.6
 - ☒ 4. ₹285.6

Question ID : **26433050406**
Status : **Answered**
Chosen Option : **4**

Q.6 In an office with 40 officers, the average salaries of class-A, class-B and class-C officers are ₹600, ₹750 and ₹1,000 a day, respectively. The numbers of class-A, class-B and class-C officers in the office are in the ratio 5 : 4 : 1, respectively. Find the monthly average salary (in ₹) of an officer, all the 40 of them taken together. [Assume the number of days in a month to be 30.]

- Ans**
- ☒ 1. 25,800
 - ☒ 2. 21,000
 - ☒ 3. 24,030
 - ☒ 4. 24,600

Question ID : **26433050348**
Status : **Answered**
Chosen Option : **2**

Q.7 The volume of a cuboid is 3300 cm^3 . The sum of the length and the breadth of the cuboid is 37 cm. If the difference between the length and the breadth of the cuboid is 13 cm, then what is the height of the cuboid?

- Ans**
- ☒ 1. 18 cm
 - ☒ 2. 11 cm
 - ☒ 3. 14 cm
 - ☒ 4. 16 cm

Question ID : **26433049761**
Status : **Answered**
Chosen Option : **2**

Q.8 Find the height of a right pyramid if its base is a square of side 80 cm and the volume of the pyramid is 16000 cm^3 .

- Ans**
- ☒ 1. 4.5 cm
 - ☒ 2. 7.5 cm
 - ☒ 3. $2\sqrt{2}$ cm
 - ☒ 4. 2.5 cm

Question ID : **26433050367**
Status : **Answered**
Chosen Option : **2**

Q.9 A and B currently have an age ratio of 7 : 3. After 7 years this age ratio will become 2 : 1. After how many years from now will the age ratio between the ages of A and B become 3 : 2?

- Ans**
- ☒ 1. 49 years
 - ☒ 2. 42 years
 - ☒ 3. 35 years
 - ☒ 4. 28 years

Question ID : **26433050255**
Status : **Answered**
Chosen Option : **3**

Q.10 P, Q and R can complete a task together in 15 days. P and R can complete the task together in 40 days. In how many days can Q complete the task alone?

- Ans**
- ☒ 1. 30 days
 - ☒ 2. 24 days
 - ☒ 3. 21 days
 - ☒ 4. 25 days

Question ID : **26433050111**
Status : **Answered**
Chosen Option : **2**

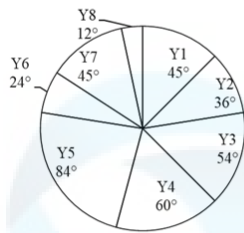
Q.11 If $P = 2^3 \times 5^8$ and $Q = 3^5 \times 7^3$, then what is the least common multiple of P and Q?

- Ans**
- ☒ 1. $2^3 \times 3^5 \times 5^8 \times 7^3$
 - ☒ 2. $3^5 \times 5^8 \times 7^3$
 - ☒ 3. $3^5 \times 5^8$
 - ☒ 4. $5^8 \times 7^3$

Question ID : **26433049987**
Status : **Answered**
Chosen Option : **1**

Q.12 Study the given pie-chart and answer the question that follows.

The following pie chart shows the sectors representing the shares of the number of matches played by a team in each of eight consecutive years in terms of the central angles (in degrees) with respect to the total number of matches played by the team in all the eight years taken together.



The total number of matches played by the team in the years Y2 and Y8 taken together is approximately what percentage of the total number of matches played by the team in all the eight years taken together?

- Ans**
- ✓ 1. 13.33%
 - ✗ 2. 15.75%
 - ✗ 3. 10.25%
 - ✗ 4. 14.28%

Question ID : **26433049767**
Status : **Answered**
Chosen Option : **1**

Q.13 The population of a village decreases every year at the rate of 3%. If the present population is 28227, what was the population of the village two years ago?

- Ans**
- ✗ 1. 31868
 - ✓ 2. 30000
 - ✗ 3. 32472
 - ✗ 4. 30560

Question ID : **26433050425**
Status : **Answered**
Chosen Option : **2**

Q.14 The price of kerosene is ₹48 per litre and the price of spirit is ₹30 per litre. In what ratio should the kerosene and spirit be mixed so that the profit after selling the mixture at ₹60 per litre will be 50%?

- Ans**
- ✗ 1. 1 : 1
 - ✓ 2. 5 : 4
 - ✗ 3. 2 : 3
 - ✗ 4. 3 : 4

Question ID : **26433050397**
Status : **Answered**
Chosen Option : **2**

Q.15 Pinky can swim 27 km downstream or 15 km upstream in 3 hours. What is the velocity of the current?

- Ans
- ☐ 1. 3 km/h
 - ☐ 2. 5 km/h
 - ☐ 3. 4 km/h
 - ☒ 4. 2 km/h

Question ID : 26433050259

Status : Answered

Chosen Option : 4

Q.16 The monthly income of a person is ₹25,000. He spends 80% of his income and saves the rest. His nominal income and his nominal spending both increase by 10%. What will be his new savings?

- Ans
- ☒ 1. ₹5,500
 - ☐ 2. ₹6,000
 - ☐ 3. ₹5,750
 - ☐ 4. ₹5,000

Question ID : 26433049726

Status : Answered

Chosen Option : 1

Q.17 नीचे दी गई तालिका का अध्ययन करें और उसके आधार पर दिए गए प्रश्न का उत्तर दें।
दी गई तालिका छः अलग-अलग शहरों में COVID-19 से पीड़ित जनसंख्या के प्रतिशत और पीड़ित पुरुषों और महिलाओं के अनुपात को दर्शाती है।

शहर	COVID-19 से पीड़ित जनसंख्या का प्रतिशत	COVID-19 से पीड़ित पुरुषों और महिलाओं का अनुपात
दुर्जनपुर	40	3:2
सीतापुर	21	2:1
दुर्गापुर	60	5:7
श्यामपुर	50	7:3
हरिपुर	55	6:5
देवपुर	25	4:1

यदि हरिपुर में, COVID-19 के पुरुष रोगियों की संख्या 8436 थी और सीतापुर में, COVID-19 के महिला रोगियों की संख्या, हरिपुर में COVID-19 के महिला रोगियों की संख्या से 30% कम थी, तो सीतापुर में COVID-19 के रोगियों की कुल संख्या कितनी थी?

- Ans
- ☐ 1. 16,872
 - ☒ 2. 14,763
 - ☐ 3. 19,794
 - ☐ 4. 13,536

Question ID : 26433050262

Status : Answered

Chosen Option : 2

Q.18 The average of four consecutive odd numbers is 8. If the next odd number is also considered, then what will be the new average of these five numbers?

- Ans** ☒ 1. 9
☐ 2. 7
☐ 3. 10
☐ 4. 11

Question ID : **26433049753**
Status : **Answered**
Chosen Option : 1

Q.19 An article costs ₹750. It is marked up to give 30% profit. What is the selling price if a customer gets a discount of 15% on it?

- Ans** ☐ 1. ₹758.75
☒ 2. ₹828.75
☐ 3. ₹800
☐ 4. Same as the cost price

Question ID : **26433050403**
Status : **Answered**
Chosen Option : 2

Q.20 The diagonal of a rectangle is 20 cm. If its breadth is 12 cm, then what will be its length?

- Ans** ☐ 1. 15 cm
☒ 2. 16 cm
☐ 3. 18 cm
☐ 4. 17 cm

Question ID : **26433049759**
Status : **Answered**
Chosen Option : 2

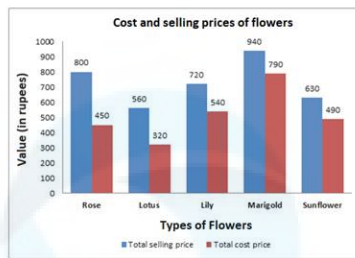
Q.21 A alone can do a piece of work in 12 days. B alone can do the same work in 18 days. C alone can do the same work in 24 days. In how many days will they complete 65% of the work, if all three work together?

- Ans** ☒ 1. 3.6 days
☐ 2. 3.9 days
☐ 3. 4.2 days
☐ 4. 4.5 days

Question ID : **26433049593**
Status : **Answered**
Chosen Option : 1

Q.22 Study the given bar-graph and answer the question that follows.

The bar-graph given below shows the total selling price (in ₹) and the total cost price (in ₹) of five different flowers in a flower shop on a particular day.



The number of roses, lilies and sunflowers sold from that shop on that day were 7, 5, and 10, respectively. Find the sum of the profits earned by selling a rose, a lily and a sunflower on that day.

- Ans
- ☒ 1. ₹120
 - ☒ 2. ₹150
 - ☒ 3. ₹90
 - ☒ 4. ₹100

Question ID : 26433050313
Status : Answered
Chosen Option : 4

Q.23 Find the length of a train, if it completely crosses two bridges of lengths 600 m and 300 m in 80 seconds and 60 seconds, respectively.

- Ans
- ☒ 1. 120 m
 - ☒ 2. 130 m
 - ☒ 3. 600 m
 - ☒ 4. 110 m

Question ID : 26433050308
Status : Answered
Chosen Option : 3

Q.24 The value of $16^2 - 256^{\frac{1}{4}} + 2197^{\frac{1}{3}}$ is:

- Ans
- ☒ 1. 265
 - ☒ 2. 280
 - ☒ 3. 262
 - ☒ 4. 241

Question ID : 26433050294
Status : Answered
Chosen Option : 1

Q.25 The selling price of a bulb is half of its cost price. What is the loss percentage?

- Ans
- ☒ 1. 60%
 - ☒ 2. 20%
 - ☒ 3. 40%
 - ☒ 4. 50%

Question ID : 26433049972
Status : Answered
Chosen Option : 4

Section : General Awareness

Q.1 'Loor' is a folk dance of which state of India?

- Ans
- ☒ 1. Haryana
 - ☒ 2. Manipur
 - ☒ 3. Karnataka
 - ☒ 4. Kerala

Question ID : 26433047695
Status : Answered
Chosen Option : 1

Q.2 The Congress split took place in _____.

- Ans
- ☒ 1. 1905
 - ☒ 2. 1903
 - ☒ 3. 1907
 - ☒ 4. 1908

Question ID : 26433047709
Status : Answered
Chosen Option : 3

Q.3 Poverty line measures poverty on the basis of:

- Ans
- ☒ 1. expenditure only
 - ☒ 2. income level and literacy rate
 - ☒ 3. savings only
 - ☒ 4. income level or consumption expenditure

Question ID : 26433047755
Status : Not Answered
Chosen Option : --

Q.4 As on Jan 2022, who among the following has been appointed as the new Chairman of ISRO?

- Ans ☒ 1. BN Suresh
☒ 2. S Somanath
☒ 3. K Sivan
☒ 4. ASK Kumar

Question ID : 26433047794
Status : Answered
Chosen Option : 2

Q.5 The Indian National Congress was established in ____.

- Ans ☒ 1. 1879
☒ 2. 1877
☒ 3. 1875
☒ 4. 1885

Question ID : 26433047158
Status : Answered
Chosen Option : 4

Q.6 In which of the following grounds did Yuvraj Singh hit 6 sixes in an over of a T20 International match?

- Ans ☒ 1. Wanderers Stadium
☒ 2. Kingsmead Stadium
☒ 3. Mabhida Stadium
☒ 4. Newlands Cricket Ground

Question ID : 26433047841
Status : Not Answered
Chosen Option : --

Q.7 Which of the following Articles of the Indian Constitution talks about joint sitting of both Houses in certain cases?

- Ans ☒ 1. Article 110
☒ 2. Article 128
☒ 3. Article 75
☒ 4. Article 108

Question ID : 26433047164
Status : Answered
Chosen Option : 4

Q.8 'The Diary of a Young Girl' is an autobiography of:

- Ans ☒ 1. Anne Frank
☐ 2. Agatha Christie
☐ 3. Michelle Obama
☐ 4. Jessica Simpson

Question ID : 26433047810
Status : Answered
Chosen Option : 1

Q.9 Which feature of the Indian Constitution is borrowed from the Constitution of Britain?

- Ans ☐ 1. Fundamental duties
☒ 2. Parliamentary government
☐ 3. Judicial review
☐ 4. Fundamental rights

Question ID : 26433047388
Status : Answered
Chosen Option : 2

Q.10 Which of the given statements is correct regarding properties of suspension?

- I. Suspension is a heterogeneous mixture.
II. The particles of a suspension can be seen by the naked eye.

- Ans ☐ 1. Only I
☐ 2. Neither I nor II
☒ 3. Both I and II
☐ 4. Only II

Question ID : 26433047648
Status : Answered
Chosen Option : 3

Q.11 Spirogyra belongs to which group of plant kingdom?

- Ans ☐ 1. Bryophyta
☐ 2. Angiosperms
☐ 3. Pteridophyta
☒ 4. Thallophyta

Question ID : 26433047149
Status : Answered
Chosen Option : 1

Q.12 Kamala Narayan is known for which classical dance form?

Ans ☒ 1. Bharatanatyam

☒ 2. Kathakali

☒ 3. Odissi

☒ 4. Kathak

Question ID : 26433047162

Status : Not Answered

Chosen Option : --

Q.13 Kardang Monastery which is a Buddhist Pilgrimage is situated in which state of India?

Ans ☒ 1. Jharkhand

☒ 2. Goa

☒ 3. Himachal Pradesh

☒ 4. Kerala

Question ID : 26433047372

Status : Not Answered

Chosen Option : --

Q.14 In February 2022, which Indian state government announced that 'Hope Express' would be launched in the state to prevent cancer?

Ans ☒ 1. Odisha

☒ 2. Maharashtra

☒ 3. Karnataka

☒ 4. Chhattisgarh

Question ID : 26433047368

Status : Not Answered

Chosen Option : --

Q.15 Who will co-host the ICC Men's T20 World Cup 2024?

Ans ☒ 1. Australia

☒ 2. The United Kingdom

☒ 3. The United States of America (USA)

☒ 4. Sri Lanka

Question ID : 26433047141

Status : Answered

Chosen Option : 3

Q.16 Which of the following crops takes almost a year to grow?

Ans ☒ 1. Sugarcane

☒ 2. Peas

☒ 3. Cucumber

☒ 4. Rice

Question ID : 26433047377

Status : Answered

Chosen Option : 1

Q.17 In 1526, _____ was defeated by Babur at Panipat.

- Ans**
- ☒ 1. Sikander Lodi
 - ☒ 2. Rana Lodi
 - ☒ 3. Bahlul Lodi
 - ☒ 4. Ibrahim Lodi

Question ID : **26433047382**
Status : **Answered**
Chosen Option : **4**

Q.18 How many countries share land boundaries with India?

- Ans**
- ☒ 1. Seven
 - ☒ 2. Ten
 - ☒ 3. Eight
 - ☒ 4. Five

Question ID : **26433047155**
Status : **Answered**
Chosen Option : **1**

Q.19 Which of the following is an example of sedimentary rocks?

- Ans**
- ☒ 1. Sandstone
 - ☒ 2. Granite
 - ☒ 3. Slate
 - ☒ 4. Marble

Question ID : **26433047376**
Status : **Answered**
Chosen Option : **1**

Q.20 Pongal is a harvest festival of which state of India?

- Ans**
- ☒ 1. Tamil Nadu
 - ☒ 2. Mizoram
 - ☒ 3. Rajasthan
 - ☒ 4. Manipur

Question ID : **26433047646**
Status : **Answered**
Chosen Option : **1**

Q.21 Which of the following is a young fold mountain?

- Ans**
- ☒ 1. The Alps
 - ☒ 2. The Appalachians
 - ☒ 3. Aravalli Range
 - ☒ 4. The Vosges

Question ID : **26433047153**
Status : **Answered**
Chosen Option : **1**

Q.22 Dharmasutras contain:

- Ans ☒ 1. tricks to capture an empire
☒ 2. norms for women only
☒ 3. techniques to recite shlokas
☒ 4. norms for rulers

Question ID : **26433047806**
Status : **Not Answered**
Chosen Option : --

Q.23 With which of the following was Kadri Gopalnath associated?

- Ans ☒ 1. Sitar
☒ 2. Saxophone
☒ 3. Tabla
☒ 4. Flute

Question ID : **26433047811**
Status : **Not Answered**
Chosen Option : --

Q.24 Which of the following bodies publishes the Human Development Report?

- Ans ☒ 1. United Nations Food Organization
☒ 2. United Nations Human Resource Development
☒ 3. World Health Organization
☒ 4. United Nations Development Programme

Question ID : **26433047817**
Status : **Not Answered**
Chosen Option : --

Q.25 When the litmus solution is neither acidic nor basic then its colour is ____.

- Ans ☒ 1. purple
☒ 2. red
☒ 3. yellow
☒ 4. blue

Question ID : **26433047700**
Status : **Not Answered**
Chosen Option : --

Multi Tasking Non Technical Staff Havaladar CBIC and CBN Examination 2021

Roll Number	
Candidate Name	
Venue Name	
Exam Date	08/07/2022
Exam Time	1:00 PM - 2:30 PM
Subject	MTS Non technical and Havaladar Examination 2021

Section : General English

Q.1 Select the most appropriate option to fill in the blank.

The Mid-Day Meal Programme has been running _____ 21 years.

- Ans ☒ 1. for
☐ 2. off
☐ 3. since
☐ 4. of

Question ID : 26433050849
Status : Answered
Chosen Option : 3

Q.2 Select the option that can be used as a one-word substitute for the given group of words.

Not fit to eat

- Ans ☐ 1. Sullen
☐ 2. Potable
☒ 3. Inedible
☐ 4. Fragile

Question ID : 26433050917
Status : Answered
Chosen Option : 3

Q.3 Select the option that can be used as a one-word substitute for the given group of words.

A large group of people, especially the nomadic

- Ans ☐ 1. Cavalry
☐ 2. Urban
☒ 3. Horde
☐ 4. Hamlet

Question ID : 26433051380
Status : Marked For Review
Chosen Option : 1

Q.4 Select the correctly spelt word.

- Ans ☒ 1. Innoculete
☒ 2. Inoculate
☒ 3. Inoculate
☒ 4. Innoculate

Question ID : 26433051639
Status : Answered
Chosen Option : 4

Q.5 Select the most appropriate meaning of the given idiom.

Water under the bridge

- Ans ☒ 1. Something which happens all the time
☒ 2. Something that does not affect the past
☒ 3. Anything from the past that is not significant or important anymore
☒ 4. A problem which has been existing and will continue to exist in the future

Question ID : 26433051464
Status : Answered
Chosen Option : 1

Q.6 The following sentence has been split into four segments. Identify the segment that contains a grammatical error.

Rivers / has being of primary / importance throughout / human history.

- Ans ☒ 1. Rivers
☒ 2. human history
☒ 3. has being of primary
☒ 4. importance throughout

Question ID : 26433051496
Status : Answered
Chosen Option : 3

Q.7 Select the most appropriate meaning of the underlined idiom.

Ron added a feather in his cap by winning that international tournament.

- Ans ☒ 1. To feel well and healthy
☒ 2. An achievement to be proud of
☒ 3. To take advantage of one's position
☒ 4. An expression of extreme annoyance

Question ID : 26433050994
Status : Answered
Chosen Option : 4

Q.8 The following sentence has been divided into parts. One of them may contain an error. Select the part that contains the error from the given options. If you don't find any error, mark 'No error' as your answer.

In spite of hardly work / she was not able / to pass the exam.

Ans ✓ 1. In spite of hardly work

✗ 2. No error

✗ 3. to pass the exam

✗ 4. she was not able

Question ID : 26433050898

Status : Answered

Chosen Option : 1

Q.9 Select the most appropriate option to fill in the blank.

He came back from the game, took a _____ shower and was ready for the evening.

Ans ✗ 1. fast

✗ 2. clean

✗ 3. heavy

✓ 4. quick

Question ID : 26433051641

Status : Marked For Review

Chosen Option : 2

Q.10 Select the option that can be used as a one-word substitute for the given group of words.

An action of making amends for a wrong or injury

Ans ✓ 1. Atonement

✗ 2. Redemption

✗ 3. Rite

✗ 4. Perjury

Question ID : 26433051658

Status : Answered

Chosen Option : 2

Q.11 Select the most appropriate synonym of the given word.

Intervene

Ans ✗ 1. Embody

✗ 2. Combine

✗ 3. Coalesce

✓ 4. Arbitrate

Question ID : 26433051634

Status : Answered

Chosen Option : 3

Q.12 Select the most appropriate synonym of the given word.

Sinister

- Ans
- ☒ 1. Pertinent
 - ☒ 2. Saintly
 - ☒ 3. Pleasant
 - ☒ 4. Evil

Question ID : 26433051148

Status : Answered

Chosen Option : 4

Q.13 Select the option that rectifies the incorrectly spelt words in the given sentence.

They have legitimete grounds to engagge users.

- Ans
- ☒ 1. They have legetimate grounds to engag users.
 - ☒ 2. They have legitimete grounds to engaegge users.
 - ☒ 3. They have legitimate grounds to engage users.
 - ☒ 4. They have legitamate grounds to engage users.

Question ID : 26433050920

Status : Answered

Chosen Option : 3

Q.14 Select the option that will improve the underlined part of the given sentence. In case no improvement is needed, select 'No improvement required'.

Despite not getting approval from the leader, we decided to carry out the plan.

- Ans
- ☒ 1. carry over
 - ☒ 2. carry away
 - ☒ 3. carry off
 - ☒ 4. No improvement required

Question ID : 26433051474

Status : Answered

Chosen Option : 3

Q.15 Select the option that will improve the underlined part of the given sentence. In case no improvement is needed, select 'No improvement required'.

In my experience, the press gallery are more concern to public affairs than private ones.

- Ans
- ☒ 1. is more concerned with
 - ☒ 2. No improvement required
 - ☒ 3. is much more concerned of
 - ☒ 4. are much concern for

Question ID : 26433051266

Status : Marked For Review

Chosen Option : 1

Q.16 Select the most appropriate **ANTONYM** of the given word.

Abate

- Ans**
- ☒ 1. Moderate
 - ☒ 2. Observe
 - ☒ 3. Aggravate
 - ☒ 4. Decrease

Question ID : **26433051694**

Status : **Answered**

Chosen Option : **4**

Q.17 Select the most appropriate **ANTONYM** of the given word.

Obvious

- Ans**
- ☒ 1. Hidden
 - ☒ 2. Plain
 - ☒ 3. Vapid
 - ☒ 4. Active

Question ID : **26433051635**

Status : **Answered**

Chosen Option : **3**

Q.18 Select the option that can be used as a one-word substitute for the given group of words.

Animals that live in water

- Ans**
- ☒ 1. Nocturnal
 - ☒ 2. Aerial
 - ☒ 3. Terrestrial
 - ☒ 4. Aquatic

Question ID : **26433050761**

Status : **Answered**

Chosen Option : **4**

Q.19 Select the most appropriate **ANTONYM** of the underlined word in the given sentence.

Many died in captivity and many suffered appalling brutality.

- Ans**
- ☒ 1. ferocity
 - ☒ 2. cruelty
 - ☒ 3. sensuality
 - ☒ 4. gentleness

Question ID : **26433050695**

Status : **Answered**

Chosen Option : **4**

Q.20 Parts of the following sentence have been given as options. One of them may contain an error. Select the part that contains the error from the given options. If you don't find any error, mark 'No error' as your answer.

The use of calculators is prohibited in the examination.

- Ans ☒ 1. is prohibited in
☒ 2. No error
☒ 3. The use of calculators
☒ 4. the examination

Question ID : 26433051131

Status : Answered

Chosen Option : 2

Comprehension:

In the following passage, some words have been deleted. Read the passage carefully and select the most appropriate option to fill in each blank.

Endurance was the three-masted ship in (1) _____ Sir Ernest Shackleton and a (2) _____ of 27 men sailed for the Antarctic on the 1914–1917 Imperial Trans-Antarctic Expedition. The ship, originally named Polaris, was built at Framnæs shipyard and (3) _____ in 1912 from Sandefjord in Norway. After her commissioners could no longer pay the shipyard, the ship (4) _____ bought by Shackleton in January 1914 for the expedition, which would be her first (5) _____.

SubQuestion No : 21

Q.21 Select the most appropriate option to fill in blank number 1.

- Ans ☒ 1. which
☒ 2. who
☒ 3. that
☒ 4. where

Question ID : 26433051626

Status : Answered

Chosen Option : 1

Comprehension:

In the following passage, some words have been deleted. Read the passage carefully and select the most appropriate option to fill in each blank.

Endurance was the three-masted ship in (1) _____ Sir Ernest Shackleton and a (2) _____ of 27 men sailed for the Antarctic on the 1914–1917 Imperial Trans-Antarctic Expedition. The ship, originally named Polaris, was built at Framnæs shipyard and (3) _____ in 1912 from Sandefjord in Norway. After her commissioners could no longer pay the shipyard, the ship (4) _____ bought by Shackleton in January 1914 for the expedition, which would be her first (5) _____.

SubQuestion No : 22

Q.22 Select the most appropriate option to fill in blank number 2.

- Ans ☒ 1. watch
☒ 2. team
☒ 3. crew
☒ 4. group

Question ID : 26433051627

Status : Marked For Review

Chosen Option : 3

Comprehension:

In the following passage, some words have been deleted. Read the passage carefully and select the most appropriate option to fill in each blank.

Endurance was the three-masted ship in (1) _____ Sir Ernest Shackleton and a (2) _____ of 27 men sailed for the Antarctic on the 1914–1917 Imperial Trans-Antarctic Expedition. The ship, originally named Polaris, was built at Framnæs shipyard and (3) _____ in 1912 from Sandefjord in Norway. After her commissioners could no longer pay the shipyard, the ship (4) _____ bought by Shackleton in January 1914 for the expedition, which would be her first (5) _____.

SubQuestion No : 23

Q.23 Select the most appropriate option to fill in blank number 3.

- Ans ☒ 1. released
☒ 2. launched
☒ 3. started
☒ 4. recovered

Question ID : 26433051628

Status : Answered

Chosen Option : 1

Comprehension:

In the following passage, some words have been deleted. Read the passage carefully and select the most appropriate option to fill in each blank.

Endurance was the three-masted ship in (1) _____ Sir Ernest Shackleton and a (2) _____ of 27 men sailed for the Antarctic on the 1914–1917 Imperial Trans-Antarctic Expedition. The ship, originally named Polaris, was built at Framnæs shipyard and (3) _____ in 1912 from Sandefjord in Norway. After her commissioners could no longer pay the shipyard, the ship (4) _____ bought by Shackleton in January 1914 for the expedition, which would be her first (5) _____.

SubQuestion No : 24

Q.24 Select the most appropriate option to fill in blank number 4.

- Ans ☒ 1. were
☒ 2. was
☒ 3. is
☒ 4. are

Question ID : 26433051629

Status : Answered

Chosen Option : 2

Comprehension:

In the following passage, some words have been deleted. Read the passage carefully and select the most appropriate option to fill in each blank.

Endurance was the three-masted ship in (1) _____ Sir Ernest Shackleton and a (2) _____ of 27 men sailed for the Antarctic on the 1914–1917 Imperial Trans-Antarctic Expedition. The ship, originally named Polaris, was built at Framnæs shipyard and (3) _____ in 1912 from Sandefjord in Norway. After her commissioners could no longer pay the shipyard, the ship (4) _____ bought by Shackleton in January 1914 for the expedition, which would be her first (5) _____.

SubQuestion No : 25

Q.25 Select the most appropriate option to fill in blank number 5.

- Ans ☒ 1. voyage
☐ 2. route
☐ 3. drive
☐ 4. hike

Question ID : 26433051630

Status : Answered

Chosen Option : 1

Section : General Intelligence and Reasoning

Q.1 Select the number that can replace the question mark (?) in the following series.

42, 38, 80, 118, 198, 316, ?

- Ans ☐ 1. 486
☐ 2. 506
☒ 3. 514
☐ 4. 494

Question ID : 26433048869

Status : Answered

Chosen Option : 3

Q.2 Eight boys A, B, C, D, E, F, G and H are sitting around a square table, facing towards the centre (but not necessarily in the same order). Two boys are sitting on each side. G and C are sitting on the same side. E is sitting opposite to G and E is to the immediate right of B. F and H are sitting on the adjacent side of G and C. F and H are sitting on the same side. H is fourth to the left of B. D is not the immediate neighbour of G. Which of the following pairs of boys represent the boys sitting on the same side of the square table?

- Ans ☐ 1. AC
☐ 2. HD
☐ 3. BD
☒ 4. BA

Question ID : 26433048881

Status : Marked For Review

Chosen Option : 4

Q.3 Select the option that is related to the third letter-cluster in the same way as the second letter-cluster is related to the first letter-cluster.

TRO : QMN :: BLA : ?

- Ans
- ☐ 1. YHZ
 - ☐ 2. XGZ
 - ☐ 3. XHG
 - ☒ 4. YGZ

Question ID : 26433048951

Status : Answered

Chosen Option : 4

Q.4 The weight of seven boys B1, B2, B3, B4, B5, B6 and B7 are compared. The weight of no two boys is the same. The weight of B4 is less than only three boys. The weight of B1 is more than B7. The weight of B2 is the most. B5 and B6 both weigh more than B1. The weight of B3 is less than that of B7.

How many boys weigh less than B1?

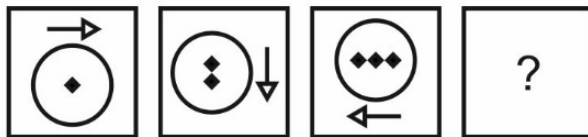
- Ans
- ☐ 1. 4
 - ☐ 2. 3
 - ☐ 3. 1
 - ☒ 4. 2

Question ID : 26433048882

Status : Answered

Chosen Option : 4

Q.5 Select the figure from among the given options that can replace the question mark (?) in the following series.



Ans

✓ 1.



✗ 2.



✗ 3.



✗ 4.



Question ID : 26433048958

Status : Answered

Chosen Option : 1

Q.6 In a certain code language, 'nu vu du' is written as 'Time and Money', 'hu du ru' is written as 'Manage Money Judiciously', and 'tu vu lu' is written as 'Save More Time'. What is the code for 'Save More Money' in that code language?

Ans ✗ 1. du nu lu

✗ 2. nu tu du

✓ 3. tu lu du

✗ 4. tu vu du

Question ID : 26433048419

Status : Answered

Chosen Option : 3

Q.7 Select the option that is related to the third letter-cluster in the same way as the second letter-cluster is related to the first letter-cluster.

KING : HFKD :: FRKM : ?


- Ans ☒ 1. CLHJ
☒ 2. CLHK
☒ 3. COHK
☒ 4. COHJ

Question ID : 26433049049

Status : Answered

Chosen Option : 4

Q.8 Select the option in which the given figure is embedded. (Rotation is not allowed)

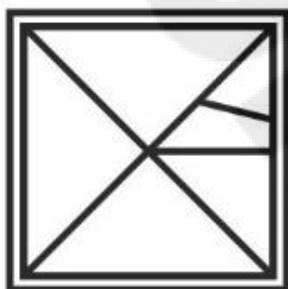


Ans

✗ 1.



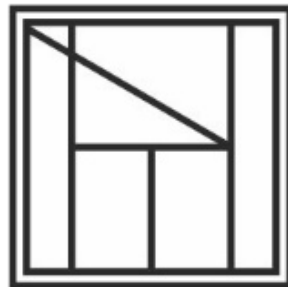
✗ 2.



✗ 3.



✓ 4.



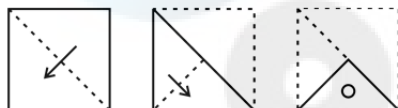
Question ID : 26433048960
Status : Answered
Chosen Option : 4

Q.9 In a certain code language, 'TORQ' is coded as '210', and 'HARN' is coded as '123'.
How will 'PADM' be coded in that code language?

- Ans ☒ 1. 94
☒ 2. 112
☒ 3. 102
☒ 4. 86

Question ID : 26433048722
Status : Answered
Chosen Option : 3

Q.10 The sequence of folding a piece of paper and the manner in which the folded paper has been cut is shown in the following figures. How would this paper look when unfolded?



Ans

- ☒ 1.
- ☒ 2.
- ☒ 3.
- ☒ 4.

Question ID : 26433048016
Status : Answered
Chosen Option : 4

Q.11 Read the given statements and conclusions carefully. Assuming that the information given in the statements is true, even if it appears to be at variance with commonly known facts, decide which of the given conclusions logically follow(s) from the statements.

Statements:

- I. No car is a bench.
- II. All tables are cars.

Conclusions:

- I. Some cars are tables.
- II. Some cars are benches.
- III. No bench is a table.

- Ans**
- ☒ 1. Only conclusion II follows
 - ☒ 2. All the conclusions follow
 - ☒ 3. Only conclusions I and III follow
 - ☒ 4. Only conclusions I and II follow

Question ID : 26433048954

Status : Answered

Chosen Option : 3

Q.12 Select the letter-cluster from among the given options that can replace the question mark (?) in the following series.

XJ, AG, DD, GA, ?

- Ans**
- ☒ 1. KX
 - ☒ 2. JX
 - ☒ 3. KY
 - ☒ 4. JY

Question ID : 26433048527

Status : Answered

Chosen Option : 2

Q.13 Select the option in which the numbers are related in the same way as are the numbers in the given set.

(18, 400, 484)

- Ans**
- ☒ 1. (20, 400, 576)
 - ☒ 2. (14, 256, 400)
 - ☒ 3. (22, 400, 324)
 - ☒ 4. (24, 676, 784)

Question ID : 26433048942

Status : Answered

Chosen Option : 4

Q.14 Five people, J, N, P, R and S are sitting in a straight row, facing the North, but not necessarily in the same order. Only N sits between J and S. S sits to the immediate left of P. J sits to the immediate right of R. Who sits at the second position from the left end?

Ans ☒ 1. S

☒ 2. J

☒ 3. P

☒ 4. R

Question ID : 26433048276

Status : Answered

Chosen Option : 2

Q.15 Select the option that is related to the fifth term in the same way as the second term is related to the first term and the fourth term is related to the third term.

U144 : S121 :: N100 : L81 :: G64 : ?

Ans ☒ 1. E49

☒ 2. G49

☒ 3. F36

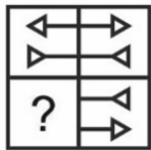
☒ 4. D30

Question ID : 26433048171

Status : Answered

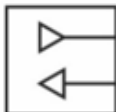
Chosen Option : 1

Q.16 Select the figure from the options that can replace the question mark (?) and complete the pattern (rotation is not allowed).

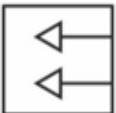


Ans

☒ 1.



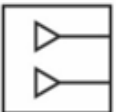
☒ 2.



☒ 3.



☒ 4.



Question ID : 26433048938

Status : Answered

Chosen Option : 1

Q.17 In a certain code language, 'MISTER' is coded as '925301', 'UNCLE' is coded as '84670', and 'SEN' is coded as '504'. How will 'MISTIC' be coded in that language?

Ans ☒ 1. 936571

☒ 2. 925326

☒ 3. 876523

☒ 4. 367829

Question ID : 26433048175

Status : Answered

Chosen Option : 2

Q.18 Read the given statements and conclusions carefully. Assuming that the information given in the statements is true, even if it appears to be at variance with commonly known facts, decide which of the given conclusions logically follow(s) from the statements.

Statements:

I. All Crax are Chips.

II. All Drinks are Chips.

Conclusions:

I. Some Drinks are not Crax.

II. All Chips are Crax.

Ans ☒ 1. Only conclusion I follows

☒ 2. Neither conclusion I nor II follows

☒ 3. Both conclusions I and II follow

☒ 4. Only conclusion II follows

Question ID : 26433048953

Status : Marked For Review

Chosen Option : 1

Q.19 Select the option in which the numbers shares the same relationship as that shared by the numbers in the given set.

(NOTE: Operations should be performed on the whole numbers, without breaking down the numbers into its constituent digits. E.g. 13 – Operations on 13 such as adding /deleting /multiplying etc. to 13 can be performed. Breaking down 13 into 1 and 3 and then performing mathematical operations on 1 and 3 is not allowed)
(46, 138, 414)

Ans ☒ 1. (38, 114, 342)

☒ 2. (42, 126, 504)

☒ 3. (52, 156, 624)

☒ 4. (56, 224, 896)

Question ID : 26433048941

Status : Answered

Chosen Option : 1

Q.20 In a certain code language, 'HAIR' is written as 'SJB I', 'POLE' is written as 'FMPQ'. How will 'MANY' be written in that language?

- Ans ☒ 1. ZOBN
☒ 2. ZPBN
☒ 3. ZOCN
☒ 4. ZOBN

Question ID : 26433049045
Status : Marked For Review
Chosen Option : 4

Q.21 Which two numbers (not digits) and two signs need to be interchanged to make the given equation correct?

$$28 \times 4 + 15 \div 8 - 34 = 388$$

- Ans ☒ 1. \times and \div ; 28 and 8
☒ 2. $+$ and \div ; 4 and 34
☒ 3. $-$ and \times ; 15 and 28
☒ 4. $+$ and \times ; 15 and 8

Question ID : 26433048515
Status : Answered
Chosen Option : 1

Q.22 Select the figure from the options that can replace the question mark (?) and complete the pattern.



- Ans ☒ 1.
- ☒ 2.
- ☒ 3.
- ☒ 4.

Question ID : 26433048638
Status : Answered
Chosen Option : 4

Q.23 After interchanging the given two signs + and – and two numbers 6 and 25, what will be the value of the given expression?

$$4 - 6 \div 5 \times 25 + 14$$

- Ans
- ☒ 1. 5
 - ☒ 2. 10
 - ☒ 3. 20
 - ☒ 4. 15

Question ID : 26433048864

Status : Answered

Chosen Option : 3

Q.24 Select the option that will replace the question mark (?) in the given series.

11, 16, 26, 41, 61, ?

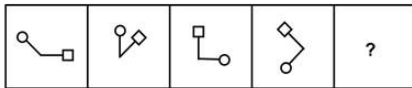
- Ans
- ☒ 1. 76
 - ☒ 2. 91
 - ☒ 3. 86
 - ☒ 4. 81

Question ID : 26433048282

Status : Answered

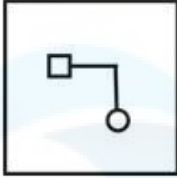
Chosen Option : 3

Q.25 Select the figure from among the given options that can replace the question mark (?) in the following series.

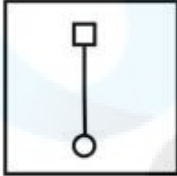


Ans

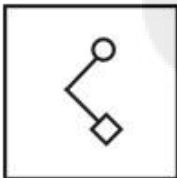
✗ 1.



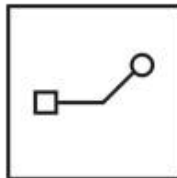
✗ 2.



✗ 3.



✓ 4.



Question ID : 26433048288

Status : Answered

Chosen Option : 4

Section : Numerical Aptitude

Q.1 The length of the common chord of two circles of radii 18 cm and 16 cm is 19.2 cm. What is the distance between the centres of the two circles? [Give your answer correct to the nearest integer value.]

Ans ✗ 1. 23 cm

✓ 2. 28 cm

✗ 3. 20 cm

✗ 4. 35 cm

Question ID : 26433050342

Status : Answered

Chosen Option : 2

Q.2 Study the given table and answer the question that follows.

The table below shows the number of cricket bats made by five workers on six days of a particular week.

Day Worker	Monday	Tuesday	Wednesday	Thursday	Friday	Saturday
A	90	70	110	85	75	60
B	40	65	70	82	90	95
C	100	95	74	80	63	60
D	40	40	50	45	60	30
E	54	65	32	48	85	96

In how many days is the number of bats made by C more than the average number of bats made by A per day?

- Ans
- ☐ 1. 3
 - ☐ 2. 4
 - ☒ 3. 2
 - ☐ 4. 1

Question ID : 26433050212

Status : Answered

Chosen Option : 4

Q.3 The length and the breadth of a rectangular cardboard are 40 cm and 35 cm, respectively. If the biggest possible square is cut out from this cardboard, what is the area of the remaining part of the cardboard?

- Ans
- ☒ 1. 175 cm^2
 - ☐ 2. 275 cm^2
 - ☐ 3. 425 cm^2
 - ☐ 4. 325 cm^2

Question ID : 26433050290

Status : Answered

Chosen Option : 1

Q.4 If the HCF of two numbers (each greater than 17) be 17 and the LCM be 561, then find the sum of the numbers.

- Ans
- ☐ 1. 387
 - ☒ 2. 238
 - ☐ 3. 268
 - ☐ 4. 340

Question ID : 26433050270

Status : Not Answered

Chosen Option : --

Q.5 Shubham bought a book from Meesho at ₹500. Meesho also charged an additional ₹25 for packaging and ₹50 for delivering the book. For what amount should Shubham sell his book to make a profit of 16%?

- Ans** ☒ 1. ₹667
☐ 2. ₹612
☐ 3. ₹783
☐ 4. ₹458

Question ID : 26433050277
Status : Answered
Chosen Option : 1

Q.6 The average weight of 17 students of a class is 56 kg. 3 new students whose weights are 57, 62 and 68 kg, respectively, join the class. Find the new average weight of the students of the class.

- Ans** ☐ 1. 56.45 kg
☒ 2. 56.95 kg
☐ 3. 58.05 kg
☐ 4. 57.65 kg

Question ID : 26433050323
Status : Answered
Chosen Option : 2

Q.7 J can complete a work in 21 days, K can complete it in 42 days and L can complete it in 63 days. If J, K and L work together, in how many days can they complete the work?

- Ans** ☐ 1. $11\frac{6}{11}$
☐ 2. $11\frac{3}{11}$
☐ 3. $11\frac{4}{11}$
☒ 4. $11\frac{5}{11}$

Question ID : 26433050385
Status : Answered
Chosen Option : 4

Q.8 If $A = \frac{3 \times 4 + 2}{6 \div 3 + 2}$ and $B = \frac{12 \div 6 \times 2}{8 \div 4 - 3}$, then what is the value of $A^2 + B^2 - 2AB$?

- Ans** ☐ 1. 72.25
☐ 2. 52.25
☐ 3. 42.25
☒ 4. 56.25

Question ID : 26433049639
Status : Answered
Chosen Option : 4

Q.9 If $m : n = 5 : 4$, then what is the value of $(m^2 + n^2) : (m^2 - n^2)$?

- Ans
- ☐ 1. 16 : 9
 - ☐ 2. 25 : 9
 - ☐ 3. 32 : 5
 - ☒ 4. 41 : 9

Question ID : 26433049630
Status : Answered
Chosen Option : 4

Q.10 A sum of money is distributed among A, B and C in the ratio 8 : 4 : 3. If A divides his part between D and E in the ratio 9 : 7, then what is the ratio of the share of C to that of D?

- Ans
- ☐ 1. 4 : 5
 - ☐ 2. 3 : 4
 - ☒ 3. 2 : 3
 - ☐ 4. 6 : 7

Question ID : 26433050205
Status : Answered
Chosen Option : 3

Q.11 The average age of 3 girls is 24 years and their ages are in the proportion of 7 : 8 : 9. What is the age of the eldest girl?

- Ans
- ☐ 1. 24 years
 - ☐ 2. 25 years
 - ☐ 3. 21 years
 - ☒ 4. 27 years

Question ID : 26433049421
Status : Answered
Chosen Option : 4

Q.12 Find the sum of money which must be invested at simple interest for 8 months at 6% per annum in order to earn ₹250 as interest.

- Ans
- ☐ 1. ₹6,550
 - ☐ 2. ₹6,225
 - ☐ 3. ₹7,250
 - ☒ 4. ₹6,250

Question ID : 26433050282
Status : Answered
Chosen Option : 4

Q.13 The cash difference between the selling prices of an article at a profit of 8% and at a loss of 4% is ₹54. Find the cost price of the article.

- Ans
- ☒ 1. ₹720
 - ☒ 2. ₹450
 - ☒ 3. ₹540
 - ☒ 4. ₹480

Question ID : 26433050276
Status : Marked For Review
Chosen Option : 2

Q.14 A certain number of identical spheres are formed by melting a large sphere of radius 28 cm. What is the number of small spheres formed if the surface area of each small sphere is 2464 cm^2 ? [Use $\pi = \frac{22}{7}$]

- Ans
- ☒ 1. 8
 - ☒ 2. 9
 - ☒ 3. 6
 - ☒ 4. 7

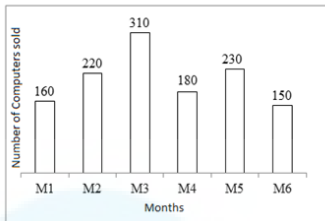
Question ID : 26433049441
Status : Answered
Chosen Option : 3

Q.15 The marked price of a laptop is ₹65,000. The laptop is sold at a discount of 20%. If a profit of 30% is made through the sale, then what is the cost price of the laptop?

- Ans
- ☒ 1. ₹50,000
 - ☒ 2. ₹45,000
 - ☒ 3. ₹48,000
 - ☒ 4. ₹40,000

Question ID : 26433049849
Status : Answered
Chosen Option : 4

Q.16 The following bar chart shows the number of computers sold by a shop in 6 consecutive months.



What is the average number of computers sold per month during this period? [Round off your answer to the nearest integer value.]

- Ans**
- ☒ 1. 204
 - ☒ 2. 219
 - ☒ 3. 212
 - ☒ 4. 208

Question ID : 26433049641

Status : Answered

Chosen Option : 4

Q.17 In a city 60% of the population are males and the rest are females. If the ratio of married males to non-married males is 5 : 7, and the ratio of married females to non-married females is 2 : 3, then what percentage of the total population is married?

- Ans**
- ☒ 1. 41%
 - ☒ 2. 59%
 - ☒ 3. 51%
 - ☒ 4. 49%

Question ID : 26433050150

Status : Answered

Chosen Option : 1

Q.18 The simple interest on a sum of money invested for a period of 10 years is equal to $\frac{4}{5}$ th of the sum invested. What is the rate of simple interest per annum that is being given?

- Ans**
- ☒ 1. 9%
 - ☒ 2. 8.5%
 - ☒ 3. 10%
 - ☒ 4. 8%

Question ID : 26433049857

Status : Answered

Chosen Option : 4

Q.19 A_1 alone can complete a piece of work in 14 days, A_2 alone can complete the same work in 21 days, while A_3 alone can complete the same work in 28 days. The three worked together, completed the work, and received a total payment of ₹1,040 for doing the work. What is A_2 's share in the total payment received?

- Ans
- ☐ 1. ₹240
 - ☐ 2. ₹480
 - ☒ 3. ₹320
 - ☐ 4. ₹400

Question ID : 26433049743
Status : Answered
Chosen Option : 3

Q.20 Ravi buys 5 pens at ₹150 each, 2 pencils at ₹100 each, and 3 notebooks at ₹250 each. What is the average expenditure incurred by Ravi per article?

- Ans
- ☐ 1. ₹180
 - ☐ 2. ₹160
 - ☒ 3. ₹170
 - ☐ 4. ₹165

Question ID : 26433049854
Status : Answered
Chosen Option : 2

Q.21 Points A and B are 200 km apart. A person starts from A at 10 a.m. at a speed of 10 km/h and goes towards B. Another person starts from B at 11 a.m. at a speed of 20 km/h and goes towards A. At what time will they meet?

- Ans
- ☐ 1. 5:10 p.m.
 - ☐ 2. 4:40 p.m.
 - ☐ 3. 5:40 p.m.
 - ☒ 4. 5:20 p.m.

Question ID : 26433049620
Status : Marked For Review
Chosen Option : 3

Q.22 A boat can travel in still water at 7 km/h and the speed of the stream is 3 km/h. Find the total time (in hours) taken by the boat to travel 60 km upstream and return to the starting point.

- Ans
- ☐ 1. 20
 - ☐ 2. 15
 - ☒ 3. 21
 - ☐ 4. 16

Question ID : 26433050209
Status : Marked For Review
Chosen Option : 3

Q.23 The length of a rectangle is increased by $16\frac{2}{3}\%$. By what approximate percentage should its breadth be decreased so that the area of the rectangle remains unchanged?

- Ans**
- ☒ 1. 17.5%
 - ☒ 2. 14.29%
 - ☒ 3. 10%
 - ☒ 4. 12.5%


Question ID : 26433049701

Status : **Marked For Review**

Chosen Option : 2

Q.24 Study the given pie-chart and answer the question that follows.

The pie-chart shows the percentage-wise distribution of teachers in a district who teach six different subjects as percentages of the total number of teachers of all the subjects taken together.



What is the ratio of the number of teachers who teach English to the number of teachers who teach Chemistry?

- Ans**
- ☒ 1. 3 : 2
 - ☒ 2. 23 : 18
 - ☒ 3. 24 : 23
 - ☒ 4. 13 : 20

Question ID : 26433050289

Status : **Answered**

Chosen Option : 3

Q.25 Select the number that will come in place of the question mark (?) in the mathematical statement.

$$(0.064)^{123} \div 0.16^{47} \times 0.4^{34} \times 0.4^{29} = (0.4)^?$$

- Ans**
- ☒ 1. 350
 - ☒ 2. 320
 - ☒ 3. 338
 - ☒ 4. 341

Question ID : 26433050268

Status : **Not Answered**

Chosen Option : --

Q.1 Which schedule of the Indian Constitution has provisions related to the Union list?

- Ans
- ☒ 1. Fourth schedule
 - ☒ 2. Ninth schedule
 - ☒ 3. Seventh schedule
 - ☒ 4. Tenth schedule

Question ID : 26433047689
Status : Answered
Chosen Option : 3

Q.2 Sarai Nurmahal is a centrally protected monument of India. It is situated in which state of India?

- Ans
- ☒ 1. Uttar Pradesh
 - ☒ 2. West Bengal
 - ☒ 3. Punjab
 - ☒ 4. Himachal Pradesh

Question ID : 26433047672
Status : Not Answered
Chosen Option : --

Q.3 Open Market Operations conducted by the Reserve Bank of India (RBI) are of _____ types.

- Ans
- ☒ 1. two
 - ☒ 2. three
 - ☒ 3. five
 - ☒ 4. four

Question ID : 26433047267
Status : Answered
Chosen Option : 2

Q.4 Which of the following diseases is caused by the prolonged deficiency of vitamin D?

- Ans
- ☒ 1. Rickets
 - ☒ 2. Chickenpox
 - ☒ 3. Scurvy
 - ☒ 4. Marasmus

Question ID : 26433047024
Status : Answered
Chosen Option : 1

Q.5 The Deccan plateau lies to the south of which of the following rivers?

- Ans ☒ 1. Narmada
☐ 2. Krishna
☐ 3. Kaveri
☐ 4. Penna

Question ID : 26433047678
Status : Answered
Chosen Option : 1

Q.6 Ravikirti was a court poet of which Chalukya ruler?

- Ans ☐ 1. Bhima II
☒ 2. Pulakeshin II
☐ 3. Vikramaditya II
☐ 4. Kirtivarman II

Question ID : 26433047682
Status : Answered
Chosen Option : 3

Q.7 Which article of the Indian Constitution states that 'No person shall be prosecuted and punished for the same offence more than once'?

- Ans ☐ 1. Article 18
☐ 2. Article 28
☒ 3. Article 20
☐ 4. Article 21A

Question ID : 26433047688
Status : Answered
Chosen Option : 2

Q.8 Which of the following events occurred as an after-effect of the Jallianwala Bagh Massacre (13th April 1919)?

- Ans ☐ 1. Hunger strike to settle disputes between the mill owners and the workers
☐ 2. Individual princes could sign a separate agreement with the British
☒ 3. Hunter Commission was appointed by the British Government
☐ 4. Popularisation of Charkha and Khadi and Jail Bhara by Congress volunteers

Question ID : 26433047034
Status : Answered
Chosen Option : 3

Q.9 Pandit Kishan Maharaj was associated with which instrument?

- Ans ☒ 1. Santoor
☒ 2. Dholak
☒ 3. Tabla
☒ 4. Sitar

Question ID : 26433047261
Status : Marked For Review
Chosen Option : 3

Q.10 What is the approximate atomic mass (u) of hydrogen?

- Ans ☒ 1. 12
☒ 2. 4
☒ 3. 1
☒ 4. 14

Question ID : 26433047676
Status : Answered
Chosen Option : 3

Q.11 What is the atomic number of chromium?

- Ans ☒ 1. 24
☒ 2. 18
☒ 3. 21
☒ 4. 19

Question ID : 26433047598
Status : Answered
Chosen Option : 1

Q.12 In which city, Prime Minister Narendra Modi launched the Ayushman Bharat Health Infrastructure Mission?

- Ans ☒ 1. Kanpur
☒ 2. Lucknow
☒ 3. Noida
☒ 4. Varanasi

Question ID : 26433047668
Status : Answered
Chosen Option : 4

Q.13 In which year did the Mughal emperor Aurangzeb die?

- Ans ☒ 1. 1707
☒ 2. 1701
☒ 3. 1705
☒ 4. 1703

Question ID : 26433047683
Status : Answered
Chosen Option : 3

Q.14 _____ is the deepest landlocked and well-protected port in India.

- Ans ☒ 1. Kandla port
☒ 2. Vishakhapatnam port
☒ 3. Tuticorin port
☒ 4. Mumbai port

Question ID : 26433047677
Status : Answered
Chosen Option : 3

Q.15 Radha Sridhar received the Sangeet Natak Akademi Award for the year 2018 for her contribution to which classical dance of India?

- Ans ☒ 1. Kathak dance
☒ 2. Kuchipudi
☒ 3. Sattriya
☒ 4. Bharatanatyam

Question ID : 26433047687
Status : Not Answered
Chosen Option : --

Q.16 Who was appointed as the Chief Economic Advisor to the Government of India in January 2022?

- Ans ☒ 1. S Ramakrishnan
☒ 2. Krishnamurthy Subramanian
☒ 3. Raghuram Rajan
☒ 4. V Anantha Nageswaran

Question ID : 26433047244
Status : Answered
Chosen Option : 4

Q.17 Which of the following statements is correct?
I. Most of Ashoka's inscriptions were written in Brahmi script.
II. Many of Chanakya's ideas were written down in a book called the Arthashastra.

- Ans ☒ 1. Only II
☒ 2. Only I
☒ 3. Neither I nor II
☒ 4. Both I and II

Question ID : 26433047256
Status : Answered
Chosen Option : 1

Q.18 Which of the following states does the dance form 'Kalbelia' belong to?

- Ans ☒ 1. Uttarakhand
☒ 2. Punjab
☒ 3. Rajasthan
☒ 4. Odisha

Question ID : 26433047020
Status : Answered
Chosen Option : 3

Q.19 In which state of India is the Yaoshang festival celebrated?

- Ans ☒ 1. Uttar Pradesh
☒ 2. Manipur
☒ 3. Rajasthan
☒ 4. Tamil Nadu

Question ID : 26433047596
Status : Answered
Chosen Option : 2

Q.20 As per census 2011, which of the following is the most spoken language of India?

- Ans ☒ 1. Hindi
☒ 2. Marathi
☒ 3. English
☒ 4. Telugu

Question ID : 26433046829
Status : Answered
Chosen Option : 1

Q.21 How many players are a part of the team on the field in a game of Hockey?

- Ans ☒ 1. 10
☒ 2. 16
☒ 3. 12
☒ 4. 11

Question ID : 26433047116
Status : Marked For Review
Chosen Option : 4

Q.22 Which of the following bases is found in window cleaner?

- Ans ☒ 1. Magnesium hydroxide
☒ 2. Ammonium hydroxide
☒ 3. Sodium hydroxide
☒ 4. Calcium hydroxide

Question ID : 26433047674
Status : Not Answered
Chosen Option : --

Q.23 David Warner played for which team in IPL 2022?

- Ans**
- ☒ 1. Sunrisers Hyderabad
 - ☒ 2. Royal Challengers Bangalore
 - ☒ 3. Delhi Capitals
 - ☒ 4. Punjab Kings

Question ID : **26433047566**
Status : **Answered**
Chosen Option : **3**

Q.24 According to the 2011 Census, which of the following has the second highest sex ratio in India?

- Ans**
- ☒ 1. Tamil Nadu
 - ☒ 2. Kerala
 - ☒ 3. Puducherry
 - ☒ 4. Maharashtra

Question ID : **26433047730**
Status : **Answered**
Chosen Option : **3**

Q.25 Who is the author of the book 'Roads to Mussoorie'?

- Ans**
- ☒ 1. Kiran Desai
 - ☒ 2. Ashwin Sanghi
 - ☒ 3. Amish Tripathi
 - ☒ 4. Ruskin Bond

Question ID : **26433047260**
Status : **Answered**
Chosen Option : **3**

Multi Tasking Non Technical Staff Havaladar CBIC and CBN Examination 2021

Roll Number	
Candidate Name	
Venue Name	
Exam Date	08/07/2022
Exam Time	5:00 PM - 6:30 PM
Subject	MTS Non technical and Havaladar Examination 2021

Section : General English

Q.1 Parts of the following sentence have been given as options. One of them contains an error. Select the part that contains the error from the given options.

The jute plant is usual harvested when it is at the flowering stage.

- Ans
- ☒ 1. when it is
 - ☒ 2. is usual harvested
 - ☒ 3. at the flowering stage
 - ☒ 4. The jute plant

Question ID : 26433051211

Status : Answered

Chosen Option : 2

Q.2 Select the most appropriate meaning of the underlined idiom.

My cousin's office is at a stone's throw from my house.

- Ans
- ☒ 1. Near the forest
 - ☒ 2. In a dangerous situation
 - ☒ 3. A short distance
 - ☒ 4. A long route

Question ID : 26433050890

Status : Answered

Chosen Option : 3

Q.3 Select the option that can be used as a one-word substitute for the given group of words.

That which can be easily broken

- Ans
- ☒ 1. Fragile
 - ☒ 2. Durable
 - ☒ 3. Portable
 - ☒ 4. Stern

Question ID : 26433050995

Status : Answered

Chosen Option : 1

Q.4 The following sentence has been divided into parts. One of them may contain an error. Select the part that contains the error from the given options. If you don't find any error, mark 'No error' as your answer.

She say that she feels very / lonely and depressed / living in a big house.

Ans ☒ 1. She say that she feels very

☐ 2. living in a big house

☐ 3. No error

☐ 4. lonely and depressed

Question ID : 26433051288

Status : Answered

Chosen Option : 1

Q.5 The following sentence has been divided into parts. One of them may contain an error. Select the part that contains the error from the given options. If you don't find any error, mark 'No error' as your answer.

I am currently worked / with a newly / set up marketing company.

Ans ☐ 1. No error

☐ 2. set up marketing company

☒ 3. I am currently worked

☐ 4. with a newly

Question ID : 26433050576

Status : Answered

Chosen Option : 3

Q.6 Select the most appropriate synonym of the given word.

Concede

Ans ☐ 1. Reject

☒ 2. Permit

☐ 3. Deny

☐ 4. Fascinate

Question ID : 26433051590

Status : Answered

Chosen Option : 2

Q.7 Select the most appropriate synonym of the underlined word in the given sentence.

We need to protest against this policy.

Ans ☒ 1. resist

☐ 2. assent

☐ 3. validate

☐ 4. perk

Question ID : 26433050541

Status : Answered

Chosen Option : 1

Q.8 Select the option that can be used as a one-word substitute for the given group of words.

Weakness and poor health

- Ans**
- ☒ 1. Geniality
 - ☒ 2. hospitality
 - ☒ 3. Frailty
 - ☒ 4. Obscurity

Question ID : **26433051631**
Status : **Answered**
Chosen Option : **3**

Q.9 Select the option that can be used as a one-word substitute for the given group of words.

To own up to something as true

- Ans**
- ☒ 1. Confess
 - ☒ 2. Suppress
 - ☒ 3. Redress
 - ☒ 4. Assess

Question ID : **26433051483**
Status : **Answered**
Chosen Option : **1**

Q.10 Select the correctly spelt word.

- Ans**
- ☒ 1. Credintial
 - ☒ 2. Habichual
 - ☒ 3. Lopsided
 - ☒ 4. Adventurios

Question ID : **26433051232**
Status : **Marked For Review**
Chosen Option : **3**

Q.11 Select the most appropriate word for the given group of words.

A person incapable of making mistakes

- Ans**
- ☒ 1. Infallible
 - ☒ 2. Pure
 - ☒ 3. Optimist
 - ☒ 4. Naive

Question ID : **26433050493**
Status : **Answered**
Chosen Option : **1**

Q.12 Select the most appropriate option to fill in the blank.

Danny lay on his back staring at the _____ of his room.

- Ans ☒ 1. sealing
☒ 2. ceiling
☒ 3. seeding
☒ 4. syringe

Question ID : 26433050704
Status : Answered
Chosen Option : 2

Q.13 Select the option that can be used as a one-word substitute for the given group of words.

A sound that is pleasing to hear

- Ans ☒ 1. Inspired
☒ 2. Melodious
☒ 3. Harsh
☒ 4. Audible

Question ID : 26433051328
Status : Answered
Chosen Option : 2

Q.14 Select the most appropriate ANTONYM of the given word.

Cowardly

- Ans ☒ 1. Integral
☒ 2. Fleeting
☒ 3. Spineless
☒ 4. Valiant

Question ID : 26433051410
Status : Answered
Chosen Option : 1

Q.15 Select the most appropriate ANTONYM of the underlined word in the given sentence.

I believe in having a clear and lucid conversation.

- Ans ☒ 1. Ambiguous
☒ 2. Tangible
☒ 3. Coherent
☒ 4. Blazing

Question ID : 26433050860
Status : Answered
Chosen Option : 1

Q.16 Select the most appropriate synonym of the given word.

Deficient

- Ans
- ☒ 1. Sleek
 - ☒ 2. Whole
 - ☒ 3. Incomplete
 - ☒ 4. Integral

Question ID : 26433050592
Status : Answered
Chosen Option : 3

Q.17 Select the INCORRECTLY spelt word.

- Ans
- ☒ 1. Admonish
 - ☒ 2. Agravate
 - ☒ 3. Assertion
 - ☒ 4. Accumulate

Question ID : 26433051413
Status : Answered
Chosen Option : 2

Q.18 Select the most appropriate option to substitute the underlined segment in the given sentence. If there is no need to substitute it, select 'No substitution required.'

The missing child was discovered in lower Maryland a few days later.

- Ans
- ☒ 1. little days later
 - ☒ 2. a lot of days later
 - ☒ 3. No substitution required
 - ☒ 4. few day later

Question ID : 26433051213
Status : Answered
Chosen Option : 3

Q.19 Select the most appropriate meaning of the given idiom.

Set the wheels in motion

- Ans
- ☒ 1. To initiate a chain of events
 - ☒ 2. To drive very fast
 - ☒ 3. To end a journey
 - ☒ 4. To end a discussion

Question ID : 26433051203
Status : Answered
Chosen Option : 1

Q.20 Select the most appropriate option to fill in the blank.

I signed this science project _____ London.

- Ans ☒ 1. beneath
☒ 2. in
☒ 3. by
☒ 4. into

Question ID : 26433050527

Status : Answered

Chosen Option : 2

Comprehension:

In the following passage, some words have been deleted. Read the passage carefully and select the most appropriate option to fill in each blank.

With over 49,000 plant species (1) _____ as of 2018, India holds (2) _____ 11.5% of all the flora in the world. Now, a new fossil record has (3) _____ that India is the birthplace of Asian bamboo, and they (4) _____ formed about 25 million years ago in the north-eastern (5) _____ of the country.

SubQuestion No : 21

Q.21 Select the most appropriate option to fill in blank number 1.

- Ans ☒ 1. reported
☒ 2. signed
☒ 3. assigned
☒ 4. deserved

Question ID : 26433050530

Status : Answered

Chosen Option : 1

Comprehension:

In the following passage, some words have been deleted. Read the passage carefully and select the most appropriate option to fill in each blank.

With over 49,000 plant species (1) _____ as of 2018, India holds (2) _____ 11.5% of all the flora in the world. Now, a new fossil record has (3) _____ that India is the birthplace of Asian bamboo, and they (4) _____ formed about 25 million years ago in the north-eastern (5) _____ of the country.

SubQuestion No : 22

Q.22 Select the most appropriate option to fill in blank number 2.

- Ans ☒ 1. on
☒ 2. off
☒ 3. upon
☒ 4. about

Question ID : 26433050531

Status : Answered

Chosen Option : 4

Comprehension:

In the following passage, some words have been deleted. Read the passage carefully and select the most appropriate option to fill in each blank.

With over 49,000 plant species (1) _____ as of 2018, India holds (2) _____ 11.5% of all the flora in the world. Now, a new fossil record has (3) _____ that India is the birthplace of Asian bamboo, and they (4) _____ formed about 25 million years ago in the north-eastern (5) _____ of the country.

SubQuestion No : 23

Q.23 Select the most appropriate option to fill in blank number 3.

- Ans
- ☒ 1. limited
 - ☒ 2. known
 - ☒ 3. shown
 - ☒ 4. arranged

Question ID : 26433050532

Status : Answered

Chosen Option : 2

Comprehension:

In the following passage, some words have been deleted. Read the passage carefully and select the most appropriate option to fill in each blank.

With over 49,000 plant species (1) _____ as of 2018, India holds (2) _____ 11.5% of all the flora in the world. Now, a new fossil record has (3) _____ that India is the birthplace of Asian bamboo, and they (4) _____ formed about 25 million years ago in the north-eastern (5) _____ of the country.

SubQuestion No : 24

Q.24 Select the most appropriate option to fill in blank number 4.

- Ans
- ☒ 1. was
 - ☒ 2. has
 - ☒ 3. were
 - ☒ 4. are

Question ID : 26433050533

Status : Answered

Chosen Option : 3

Comprehension:

In the following passage, some words have been deleted. Read the passage carefully and select the most appropriate option to fill in each blank.

With over 49,000 plant species (1) _____ as of 2018, India holds (2) _____ 11.5% of all the flora in the world. Now, a new fossil record has (3) _____ that India is the birthplace of Asian bamboo, and they (4) _____ formed about 25 million years ago in the north-eastern (5) _____ of the country.

SubQuestion No : 25

Q.25 Select the most appropriate option to fill in blank number 5.

Ans ☒ 1. part

☐ 2. beside

☐ 3. type

☐ 4. bit

Question ID : 26433050534

Status : Answered

Chosen Option : 1

Section : General Intelligence and Reasoning

Q.1 Select the figure from the given options that can replace the question mark (?) and complete the pattern.

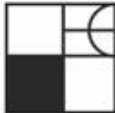


Ans

☒ 1.



☐ 2.



☐ 3.



☐ 4.



Question ID : 26433048763

Status : Answered

Chosen Option : 1

Q.2 Select the option that is related to the fourth number in the same way as the first number is related to the second number and the fifth number is related to the sixth number.

32 : 99 :: ? : 45 :: 16 : 51

- Ans
- ☒ 1. 18
 - ☒ 2. 12
 - ☒ 3. 10
 - ☒ 4. 14

Question ID : 26433048766

Status : Answered

Chosen Option : 4

Q.3 Select the option that is related to the third letter-cluster in the same way as the second letter-cluster is related to the first letter-cluster.

PM : RJ :: TF : ?

- Ans
- ☒ 1. VD
 - ☒ 2. VC
 - ☒ 3. UD
 - ☒ 4. UC

Question ID : 26433048549

Status : Answered

Chosen Option : 2

Q.4 Select the option that is related to the third letter-cluster in the same way as the second letter-cluster is related to the first letter-cluster.

KIN : MGS :: RFB : ?

- Ans
- ☒ 1. THE
 - ☒ 2. TCG
 - ☒ 3. TDH
 - ☒ 4. TDG

Question ID : 26433048776

Status : Answered

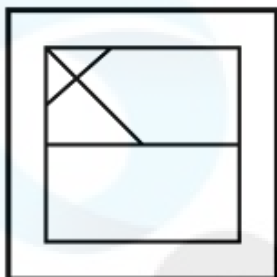
Chosen Option : 4

Q.5 Select the option in which the given figure is embedded (rotation is NOT allowed).

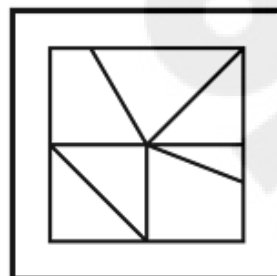


Ans

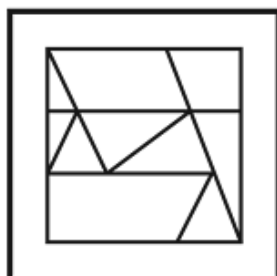
✗ 1.



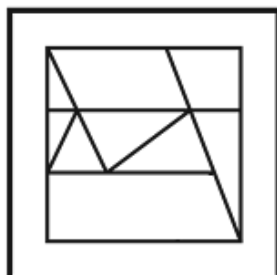
✓ 2.



✗ 3.



✗ 4.



Question ID : 26433047939

Status : Answered

Chosen Option : 2

Q.6 Which two digits need to be interchanged to make the following equation correct?

$$16 \div 7 \times 2 + 4 - 3 = 12$$

- Ans ☒ 1. 2 and 4
☒ 2. 7 and 4
☒ 3. 16 and 2
☒ 4. 7 and 3

Question ID : 26433047986
Status : Answered
Chosen Option : 2

Q.7 Select the number from among the given options that can replace the question mark (?) in the following series.

64, 68, 77, 93, 118, ?

- Ans ☒ 1. 168
☒ 2. 154
☒ 3. 157
☒ 4. 134

Question ID : 26433048593
Status : Answered
Chosen Option : 2

Q.8 In a certain code language, 'HERO' is written as 'IGSQ' and 'LOVE' is written as 'MQWG'. How will 'ROAD' be written in that language?

- Ans ☒ 1. SQBF
☒ 2. SQBE
☒ 3. SQCF
☒ 4. SPBF

Question ID : 26433047922
Status : Answered
Chosen Option : 1

Q.9 In a certain code language, 'AB CD' is coded as '10', and 'EG FA' is coded as '19'. How will 'JR LF' be coded in that language?

- Ans ☒ 1. 48
☒ 2. 50
☒ 3. 46
☒ 4. 44

Question ID : 26433048872
Status : Answered
Chosen Option : 3

Q.10 Select the correct mirror image of the given figure when the mirror is placed at AB as shown.



Ans

☒ 1.



☒ 2.



☒ 3.



☒ 4.

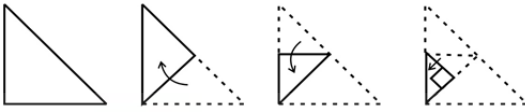


Question ID : 26433048586

Status : Answered

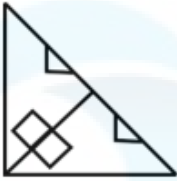
Chosen Option : 2

Q.11 The sequence of folding a piece of paper and the manner in which the folded paper has been cut is shown in the following figures. How would this paper look when unfolded?

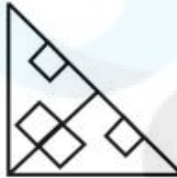


Ans

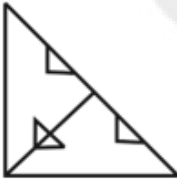
✗ 1.



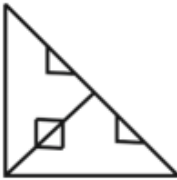
✓ 2.



✗ 3.



✗ 4.

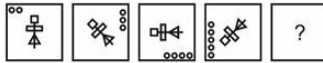


Question ID : 26433048116

Status : Answered

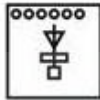
Chosen Option : 2

Q.12 Select the figure from among the given options that can replace the question mark (?) in the following series.

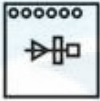


Ans

✓ 1.



✗ 2.



✗ 3.



✗ 4.



Question ID : 26433048609

Status : Answered

Chosen Option : 1

Q.13 Eight girls X, Y, Z, U, V, W, S and T are sitting around a circular table, facing towards the centre (not necessarily in the same order). X is second to the left of U. U is third to the left of V. Z is third to the right of S. S is not the immediate neighbour of V. T is third to the right of Y. Y is second to the right of S. Three out of the following four options are similar by a certain logic and form a group. Which of the following does NOT belong to that group?

Ans ✗ 1. YS

✗ 2. WV

✓ 3. YZ

✗ 4. UX

Question ID : 26433048681

Status : Answered

Chosen Option : 3

Q.14 In a certain code language, 'OVERT' is written as 'LEVIG' and 'MOKIN' is written as 'NLPRM'. How will 'ILICO' be written in that language?

Ans ✓ 1. RORXL

✗ 2. RORWL

✗ 3. RORXK

✗ 4. RORXM

Question ID : 26433048299

Status : Answered

Chosen Option : 1

Q.15 Read the given statements and conclusions carefully. Assuming that the information given in the statements is true, even if it appears to be at variance with commonly known facts, decide which of the given conclusions logically follow(s) from the statements.

Statements:

No forests are trees.
Some trees are short.

Conclusions:

I. Some forests are short.
II. No tree is a forest.

- Ans**
- ☒ 1. Neither conclusion I nor II follow.
 - ☒ 2. Only conclusion II follows.
 - ☒ 3. Both conclusions I and II follow.
 - ☒ 4. Only conclusion I follows.

Question ID : 26433047929

Status : Answered

Chosen Option : 2

Q.16 In a certain code language, 'Red are sweet brown' is coded as '8 6 4 2', and 'Blue moon are white' is coded as '5 3 1 2'. What is the code for 'are' in that language?

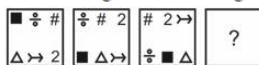
- Ans**
- ☒ 1. 2
 - ☒ 2. 6
 - ☒ 3. 1
 - ☒ 4. 4

Question ID : 26433048545

Status : Answered

Chosen Option : 1

Q.17 Select the figure from among the given options that can replace the question mark (?) in the following series.



Ans

- ☒ 1.
- ☒ 2.
- ☒ 3.
- ☒ 4.

Question ID : 26433048783

Status : Answered

Chosen Option : 2

Q.18 Six boys A1, A2, A3, A4, A5 and A6 are sitting around a circular table, facing towards the centre. A4 is the third to the left of A1. A5 and A3 are neighbours of A4. A6 is to the immediate right of A5.
Who is sitting third from the left of A6?

- Ans
- ☒ 1. A2
 - ☒ 2. A3
 - ☒ 3. A5
 - ☒ 4. A4

Question ID : 26433048605
Status : Answered
Chosen Option : 2

Q.19 Identify the number that does NOT belong to the following series.

20, 10, 10, 15, 30, 90

- Ans
- ☒ 1. 15
 - ☒ 2. 10
 - ☒ 3. 30
 - ☒ 4. 90

Question ID : 26433048669
Status : Not Attempted and Marked For Review
Chosen Option : --

Q.20 Seven teachers M, N, O, P, Q, R and S take different number of tuitions. P takes more tuitions than S. M takes more tuitions than Q. R takes the second highest number of tuitions. The number of tuitions that O takes is less than only that of four teachers. N takes less tuitions than P but more than M. Q takes the least number of tuitions. S takes the second lowest number of tuitions.
In terms of the number of tuitions taken, who is between N and S?

- Ans
- ☒ 1. R, Q
 - ☒ 2. P, M
 - ☒ 3. O, P
 - ☒ 4. M, O

Question ID : 26433048682
Status : Answered
Chosen Option : 4

Q.21 After interchanging the given two signs and two numbers, what will be the value of the following expression?
4 and 12; ÷ and +
 $12 \times 4 + 3 \div 6 - 2$

- Ans
- ☒ 1. 30
 - ☒ 2. 20
 - ☒ 3. 15
 - ☒ 4. 25

Question ID : 26433048664
Status : Answered
Chosen Option : 2

Q.22 Select the letter from among the given options that can replace the question mark (?) in the following series.

D, G, J, M, P, ?

Ans ☒ 1. R

☒ 2. S

☒ 3. T

☒ 4. U

Question ID : 26433047968

Status : Answered

Chosen Option : 2

Q.23 Select the set in which the numbers are related in the same way as are the numbers of the following sets.

(NOTE : Operations should be performed on the whole numbers, without breaking down the numbers into its constituent digits. E.g 13 – Operations on 13 such as adding /deleting /multiplying etc. to 13 can be performed. Breaking down 13 into 1 and 3 and then performing mathematical operations on 1 and 3 is NOT allowed)

(2, 3, 25)

(3, 4, 49)

Ans ☒ 1. (4, 5, 81)

☒ 2. (4, 5, 91)

☒ 3. (4, 6, 110)

☒ 4. (4, 7, 111)

Question ID : 26433047934

Status : Answered

Chosen Option : 1

Q.24 Select the option that is related to the fifth term in the same way as the second term is related to the first term and the fourth term is related to the third term.

B 2 : F 6 :: K 11 : O 15 :: R 18 : ?

Ans ☒ 1. U 20

☒ 2. V 21

☒ 3. W 21

☒ 4. V 22

Question ID : 26433047919

Status : Answered

Chosen Option : 4

Q.25 Read the given statements and conclusions carefully. Assuming that the information given in the statements is true, even if it appears to be at variance with commonly known facts, decide which of the given conclusions logically follow(s) from the statements.

Statements:

I. Some M are P.

II. All X are M.

Conclusions:

I. Some P are X.

II. Some P are M.

III. No P is X.

- Ans**
- ✓ 1. Only conclusion II follows
 - ✗ 2. Only conclusions I and III follow
 - ✗ 3. Only conclusion III follows
 - ✗ 4. None of the conclusions follow

Question ID : 26433048779

Status : Answered

Chosen Option : 1

Section : Numerical Aptitude

Q.1 A boat can travel 42 km in 6 hours while going upstream. If the speed of the stream is 2 km/h, then how much distance will the boat cover in 12 hours while going downstream?

- Ans**
- ✗ 1. 156 km
 - ✗ 2. 120 km
 - ✓ 3. 132 km
 - ✗ 4. 144 km

Question ID : 26433049920

Status : Answered

Chosen Option : 3

Q.2 The value of $[12 \times 5 - \{200 - (501 + 247 - 386)\}] \div 2$ is:

- Ans**
- ✗ 1. 82
 - ✓ 2. 111
 - ✗ 3. 61
 - ✗ 4. 62

Question ID : 26433050093

Status : Answered

Chosen Option : 2

Q.3 The perimeter of an equilateral triangle is 36 cm. What is the area of this triangle?

- Ans**
- ☒ 1. $96\sqrt{3} \text{ cm}^2$
 - ☒ 2. $36\sqrt{3} \text{ cm}^2$
 - ☒ 3. $24\sqrt{3} \text{ cm}^2$
 - ☒ 4. $27\sqrt{3} \text{ cm}^2$

Question ID : 26433049585

Status : Answered

Chosen Option : 2

Q.4 A can do a work in 10 days and B can do the same work in 15 days. If they work on it together for 4 days, then the fraction of the work that is left is:

- Ans**
- ☒ 1. $\frac{2}{3}$
 - ☒ 2. $\frac{3}{5}$
 - ☒ 3. $\frac{3}{4}$
 - ☒ 4. $\frac{1}{3}$

Question ID : 26433049260

Status : Answered

Chosen Option : 4

Q.5 The average of 11 observations is 10, that of the first 6 being 9 and that of the last 6 being 11. What is the 6th observation?

- Ans**
- ☒ 1. 11
 - ☒ 2. 8
 - ☒ 3. 9
 - ☒ 4. 10

Question ID : 26433049323

Status : Answered

Chosen Option : 4

Q.6 If $0.04 : 0.06 :: 0.06 : A$, then what is the value of A?

- Ans**
- ☒ 1. 0.05
 - ☒ 2. 0.08
 - ☒ 3. 0.06
 - ☒ 4. 0.09

Question ID : 26433049930

Status : Answered

Chosen Option : 4

Q.7

If $A = \frac{1}{2} \div \frac{1}{3} \times \frac{1}{4} + \frac{1}{5} \times \frac{1}{6}$ and $B = \frac{1}{6} \div \frac{1}{3} \times \frac{1}{5} + \frac{1}{4} \times \frac{1}{2}$, then what is the value of $(A - B)$?

Ans

✗ 1. $\frac{1}{5}$

✓ 2. $\frac{11}{60}$

✗ 3. $\frac{33}{35}$

✗ 4. $\frac{25}{36}$

Question ID : 26433049939

Status : Answered

Chosen Option : 2

Q.8

How much amount can a person get on a sum of ₹6,600, if it is invested at 6.2% per annum for a period of 2 years 6 months on simple interest?

Ans

✗ 1. ₹7,222

✓ 2. ₹7,623

✗ 3. ₹7,852

✗ 4. ₹7,546

Question ID : 26433049331

Status : Answered

Chosen Option : 2

Q.9

P starts from A at 6 a.m. and reaches B after 8 hours. Q starts from B at 8 a.m. and reaches A after 9 hours. When they meet, what is the ratio of the distance travelled by Q to the distance travelled by P?

Ans

✗ 1. 3 : 8

✗ 2. 6 : 7

✓ 3. 6 : 11

✗ 4. 8 : 3

Question ID : 26433049996

Status : Answered

Chosen Option : 3

Q.10 On an 18% discount sale, an article costs ₹6,560. What is the marked price of the article?

- Ans**
- ☒ 1. ₹8,800
 - ☒ 2. ₹7,000
 - ☒ 3. ₹8,000
 - ☒ 4. ₹7,500

Question ID : 26433049328
Status : Answered
Chosen Option : 3

Q.11 The diagonal of a rectangle is 12 cm long, and it is twice as long as one of the sides of the rectangle. What is the area of this rectangle?

- Ans**
- ☒ 1. $25\sqrt{3} \text{ cm}^2$
 - ☒ 2. $30\sqrt{3} \text{ cm}^2$
 - ☒ 3. $36\sqrt{3} \text{ cm}^2$
 - ☒ 4. $42\sqrt{3} \text{ cm}^2$

Question ID : 26433050115
Status : Answered
Chosen Option : 3

Q.12 4 boys or 7 girls can complete a piece of work in 18 days. How many days will 12 boys and 21 girls together take to complete this job?

- Ans**
- ☒ 1. 3 days
 - ☒ 2. 4 days
 - ☒ 3. 6 days
 - ☒ 4. 5 days

Question ID : 26433050286
Status : Answered
Chosen Option : 1

Q.13 The number of boys in a class is 45% of the total number of students in the class. If the number of girls in the class is 33, then what is the number of boys in the class?

- Ans**
- ☒ 1. 27
 - ☒ 2. 21
 - ☒ 3. 30
 - ☒ 4. 24

Question ID : 26433049900
Status : Answered
Chosen Option : 1

Q.14 A solid sphere whose radius is 21 cm is melted and recast into a regular pyramid of square base. If height of the pyramid is 66 cm, then what is the length of each side of the base of the pyramid? [Use $\pi = \frac{22}{7}$]

- Ans**
- ☐ 1. 68 cm
 - ☐ 2. 85 cm
 - ☒ 3. 42 cm
 - ☐ 4. 48 cm

Question ID : **26433050242**
Status : **Answered**
Chosen Option : **3**

Q.15 120 apples, 240 oranges and 150 pears are packed in cartons in such a way that each carton has the same number of fruits, each carton contains only one type of fruit, and no fruit is left unpacked. What is the smallest possible number of cartons needed for the purpose?

- Ans**
- ☐ 1. 50
 - ☐ 2. 40
 - ☒ 3. 17
 - ☐ 4. 30

Question ID : **26433049270**
Status : **Answered**
Chosen Option : **3**

Q.16 Two mixers and one TV cost ₹500, while two TVs and one mixer cost ₹700. The cost of one TV is:

- Ans**
- ☐ 1. ₹100
 - ☐ 2. ₹400
 - ☒ 3. ₹300
 - ☐ 4. ₹200

Question ID : **26433049276**
Status : **Answered**
Chosen Option : **3**

Q.17 The following table shows the numbers of pairs of shoes of 6 different brands sold by a shop during a given week.

Brand	Shoes
B1	42
B2	58
B3	61
B4	49
B5	71
B6	49

The shop also sells brand B7 now. The number of pairs of shoes sold of B7 are 20% more than the average number of shoes sold of the other 6 brands. What is the number of shoes sold of B7?

- Ans**
- ☒ 1. 68
 - ☒ 2. 76
 - ☒ 3. 72
 - ☒ 4. 66

Question ID : 26433050015

Status : Answered

Chosen Option : 4

Q.18 The average of seven numbers is 20. If 2 is subtracted from each number, then what will the new average be?

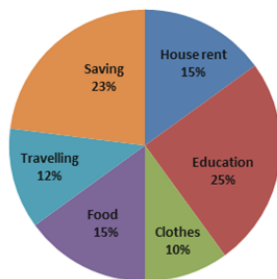
- Ans**
- ☒ 1. 22
 - ☒ 2. 10
 - ☒ 3. 9
 - ☒ 4. 18

Question ID : 26433049577

Status : Answered

Chosen Option : 4

Q.19 The following pie chart shows the expenditure of Ayush on various heads, including Savings, as percentages of his income.



If the expenditure of Ayush on Food is ₹18,000, then what would his savings be?

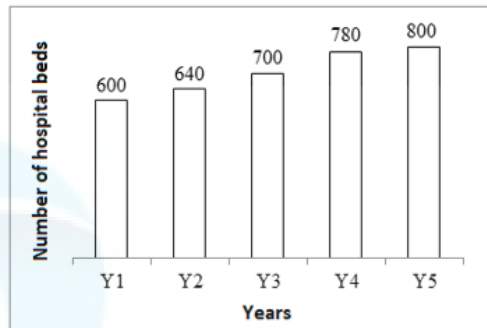
- Ans**
- ☒ 1. ₹31,200
 - ☒ 2. ₹26,400
 - ☒ 3. ₹27,600
 - ☒ 4. ₹33,000

Question ID : 26433050114

Status : Answered

Chosen Option : 3

- Q.20** The following bar chart shows the number of hospital beds in a state in 5 consecutive years.



The number of hospital beds in Y6 will be 20% more than the number of such beds in Y5, and the number of hospital beds in Y7 will be 25% more than the number of such beds in Y6. What is the ratio of the number of hospital beds in Y2 to the number of hospital beds in Y7?

- Ans**
- ☒ 1. 16 : 31
 - ☒ 2. 8 : 15
 - ☒ 3. 2 : 7
 - ☒ 4. 4 : 7

Question ID : 26433049941
Status : Answered
Chosen Option : 2

- Q.21** A : B = 12 : 17 and A is 20% more than C. If B is 15% less than D, then C is what percentage of D?

- Ans**
- ☒ 1. 47.5%
 - ☒ 2. 50%
 - ☒ 3. 52.5%
 - ☒ 4. 55%

Question ID : 26433049601
Status : Answered
Chosen Option : 2

- Q.22** The average weight of all the 200 employees in an office is 68.2 kg, where $\frac{2}{5}$ of the employees are ladies and the ratio of the average weight of a man to that of a woman is 7 : 5. Find the average weight of the female employees.

- Ans**
- ☒ 1. 60 kg
 - ☒ 2. 54 kg
 - ☒ 3. 55 kg
 - ☒ 4. 59 kg

Question ID : 26433050223
Status : Answered
Chosen Option : 3

Q.23 The population of a town is increasing at the rate of 10% per year. If the present population of the town is 1,00,000, what will its population be 2 years from now?

- Ans
- ☒ 1. 3,00,000
 - ☒ 2. 1,21,000
 - ☒ 3. 2,10,000
 - ☒ 4. 1,20,000

Question ID : **26433049282**
Status : **Answered**
Chosen Option : **2**

Q.24 Raju sells an object at 20% below its cost price. If he sold it for ₹450 more, he would have made a profit of 25%. What is the original selling price of the object?

- Ans
- ☒ 1. ₹700
 - ☒ 2. ₹500
 - ☒ 3. ₹900
 - ☒ 4. ₹800

Question ID : **26433050102**
Status : **Answered**
Chosen Option : **4**

Q.25 The ratio of the numbers of boys and girls in a school is 5 : 8. If there are 260 students in the school, then what is the difference between the numbers of girls and boys in the school?

- Ans
- ☒ 1. 50
 - ☒ 2. 80
 - ☒ 3. 40
 - ☒ 4. 60

Question ID : **26433050006**
Status : **Answered**
Chosen Option : **4**

Section : **General Awareness**

Q.1 In which state of India is Sekrenyi Festival celebrated?

- Ans
- ☒ 1. Nagaland
 - ☒ 2. Rajasthan
 - ☒ 3. Tamil Nadu
 - ☒ 4. Bihar

Question ID : **26433047396**
Status : **Not Answered**
Chosen Option : **--**

Q.2 _____ is an Indian sport in which a 'raider' enters the opposite team's half to tag opponents, without taking a breath.

- Ans
- ☒ 1. Kho-Kho
 - ☒ 2. Kabaddi
 - ☒ 3. Mallakhamb
 - ☒ 4. Throwball

Question ID : 26433047016
Status : Answered
Chosen Option : 2

Q.3 Who among the following is popularly known as 'Panchamda'?

- Ans
- ☒ 1. Zakir Hussain
 - ☒ 2. Jagjit Singh
 - ☒ 3. AR Rahman
 - ☒ 4. RD Burman

Question ID : 26433046736
Status : Not Answered
Chosen Option : --

Q.4 With respect to the seasons in India, the term 'Kaal Baisakhi' is related to which of the following states in India?

- Ans
- ☒ 1. West Bengal
 - ☒ 2. Karnataka
 - ☒ 3. Punjab
 - ☒ 4. Kerala

Question ID : 26433047503
Status : Not Answered
Chosen Option : --

Q.5 Which of the following is the earliest form of Veda?

- Ans
- ☒ 1. Atharva Veda
 - ☒ 2. Sama Veda
 - ☒ 3. Yajur Veda
 - ☒ 4. Rig Veda

Question ID : 26433046731
Status : Answered
Chosen Option : 4

Q.6 Who among the following has been appointed as India's Foreign Secretary effective from 1 May 2022?

- Ans ☒ 1. Vinay Mohan Kwatra
☐ 2. Harsh Vardhan Shringla
☐ 3. Subrahmanyam Jaishankar
☐ 4. Sujata Mehta

Question ID : 26433046719
Status : Answered
Chosen Option : 1

Q.7 As per Census 2011, which of the following states of India has the lowest literacy rate?

- Ans ☐ 1. Kerala
☐ 2. Andhra Pradesh
☐ 3. Tamil Nadu
☒ 4. Bihar

Question ID : 26433046979
Status : Answered
Chosen Option : 4

Q.8 'Mudiyettu' is a traditional folk theatre form of which Indian state?

- Ans ☐ 1. Manipur
☒ 2. Kerala
☐ 3. Jharkhand
☐ 4. Assam

Question ID : 26433047320
Status : Answered
Chosen Option : 2

Q.9 Rohini Bhate, recipient of Kalidas Samman was associated with which classical dance of India?

- Ans ☐ 1. Odissi
☐ 2. Manipuri
☐ 3. Sattriya
☒ 4. Kathak

Question ID : 26433047512
Status : Not Answered
Chosen Option : --

Q.10 As announced in the Union Budget of Financial Year 2022, income from virtual digital assets will be taxed at _____.

- Ans
- ☒ 1. 2%
 - ☒ 2. 25%
 - ☒ 3. 35%
 - ☒ 4. 3%

Question ID : 26433046742
Status : Answered
Chosen Option : 2

Q.11 Vinod talks about the only planet with liquid water on the surface. Which of the following planets is he talking about?

- Ans
- ☒ 1. Earth
 - ☒ 2. Venus
 - ☒ 3. Mars
 - ☒ 4. Saturn

Question ID : 26433046676
Status : Answered
Chosen Option : 1

Q.12 Which of the following cell organelles functions both as a passageway for intracellular transport and as a manufacturing surface?

- Ans
- ☒ 1. Golgi Apparatus
 - ☒ 2. Lysosome
 - ☒ 3. Mitochondria
 - ☒ 4. Endoplasmic Reticulum

Question ID : 26433047499
Status : Not Answered
Chosen Option : --

Q.13 Which of the following is a famous example of a temple built in complete Dravidian style?

- Ans
- ☒ 1. Konark Sun temple, Konark
 - ☒ 2. Kandariya Mahadeo temple at Khajuraho
 - ☒ 3. Kamakhya temple at Guwahati
 - ☒ 4. Kailasa temple at Ellora

Question ID : 26433046672
Status : Not Answered
Chosen Option : --

Q.14 Who among the following began the Suddhi Movement, which enabled the Hindus who had accepted Islam or Christianity to return to Hinduism, their original faith?

- Ans
- ☒ 1. Ramakrishna Paramhansa
 - ☒ 2. Keshab Chandra Sen
 - ☒ 3. Narendra Nath Dutta
 - ☒ 4. Dayanand Saraswati

Question ID : 26433047508
Status : Not Answered
Chosen Option : --

Q.15 Which of the following is NOT a part of the Preamble of India?

- Ans
- ☒ 1. Liberty
 - ☒ 2. Equality
 - ☒ 3. Aristocracy
 - ☒ 4. Justice

Question ID : 26433046688
Status : Answered
Chosen Option : 3

Q.16 Who among the following was the first Muslim woman ruler of medieval India from 1236 to 1240 AD?

- Ans
- ☒ 1. Razia Sultana
 - ☒ 2. Sultana Chand Bibi
 - ☒ 3. Rani Mangammal
 - ☒ 4. Begum Samru

Question ID : 26433046682
Status : Answered
Chosen Option : 1

Q.17 New Zealand defeated India in the finals of the inaugural World Test Championship in June 2021. Which country hosted this match?

- Ans
- ☒ 1. South Africa
 - ☒ 2. England
 - ☒ 3. Australia
 - ☒ 4. New Zealand

Question ID : 26433047315
Status : Answered
Chosen Option : 2

Q.18 What was the former name of the Yamuna Expressway Project constructed in Uttar Pradesh, India?

- Ans ☒ 1. Purvanchal Expressway
☒ 2. Taj Expressway
☒ 3. Noida-Agra Expressway
☒ 4. Kennedy Expressway

Question ID : 26433046677
Status : Not Answered
Chosen Option : --

Q.19 'Straight from the Heart' is the autobiography of which of the following famous personalities?

- Ans ☒ 1. Sachin Tendulkar
☒ 2. Rahul Dravid
☒ 3. Kapil Dev
☒ 4. Sunil Gavaskar

Question ID : 26433046735
Status : Not Answered
Chosen Option : --

Q.20 Which of the following is the correct chemical formula of sodium aluminate?

- Ans ☒ 1. NaAlO_2
☒ 2. Na_3AlO
☒ 3. NaAlO_3
☒ 4. Na_2AlO_3

Question ID : 26433047398
Status : Answered
Chosen Option : 4

Q.21 How many laws were repealed under the Farm Laws Repeal Bill, 2021?

- Ans ☒ 1. Two
☒ 2. Three
☒ 3. Four
☒ 4. One

Question ID : 26433046668
Status : Answered
Chosen Option : 3

Q.22 The movement of people across regions and territories is called _____.

- Ans ☒ 1. Depopulation
☒ 2. migration
☒ 3. mortality
☒ 4. demographic transition

Question ID : 26433047630
Status : Answered
Chosen Option : 2

Q.23 Which of the following statements is correct?

- I. Robert Clive had come to Madras from England in 1743 at the age of 18.
II. After the battle of Buxar, the East India Company appointed Residents in Indian states.

- Ans ☒ 1. Only I
☒ 2. Neither I nor II
☒ 3. Only II
☒ 4. Both I and II

Question ID : 26433047334
Status : Not Answered
Chosen Option : --

Q.24 Which of the following statements is correct regarding 'Arthropoda'?

- I. These animals are bilaterally symmetrical.
II. They have jointed legs.

- Ans ☒ 1. Both I and II
☒ 2. Neither I nor II
☒ 3. Only II
☒ 4. Only I

Question ID : 26433047325
Status : Not Answered
Chosen Option : --

Q.25 Article 280 of the Constitution of India talks about which constitutional body?

- Ans ☒ 1. Goods and Service Tax Council
☒ 2. Election commission of India
☒ 3. Attorney General of India
☒ 4. Finance commission

Question ID : 26433047514
Status : Not Answered
Chosen Option : --